



Teachingninja.in

DSSSB PRT 27 Mar 2022 Shift 1 Paper

- ★ **Latest Govt Job updates**
- ★ **Private Job updates**
- ★ **Free Mock tests available**

Visit - teachingninja.in

Test Date	27/03/2022
Test Time	8:30 AM - 10:30 AM
Subject	ASSISTANT TEACHER PRIMARY

Q.1 Out of the given options, three are similar in a certain manner. However, one option is NOT like the other three. Select the option which is different from the rest.

Ans A. 961

B. 625

C. 841

D. 361


Question ID : 75322912768



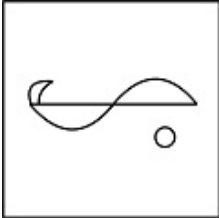
Teachingninja.in

1034357197

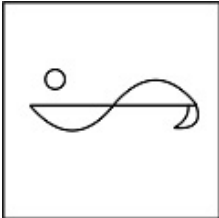
Q.2 Which of the answer figures is the right water image of the given figure?



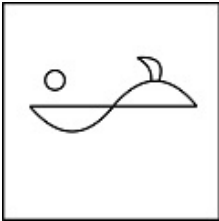
Ans A. B
IMAGE



B. A
IMAGE



C. D
IMAGE



D. C
IMAGE



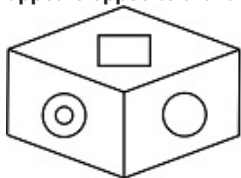
Question ID : 75322912775

Q.3 If PILOT = 63, RICE = 73 then RULE = ?

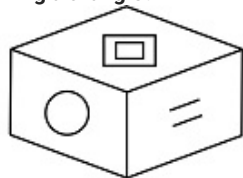
Ans A. 63
 B. 65
 C. 56
 D. 52

Question ID : 75322912762

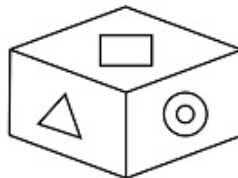
Q.4 Given below are three positions of the same dice. Which of the symbols in the options appears opposite the face having a triangle?



(i)

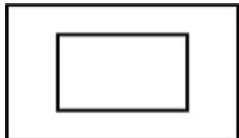


(ii)

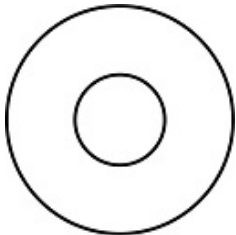


(iii)


Ans A. C
IMAGE



B. A
IMAGE



C. B
IMAGE



D. D
IMAGE



Question ID : 75322912771

Q.5 Rahul is the brother of Ajay. Shruti is the sister of Sahil. Ajay is the son of Shruti. How is Rahul related to Sahil?

Ans A. Father

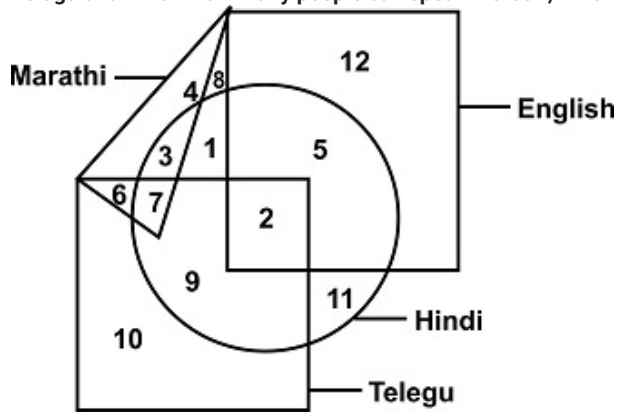
B. Sister's son

C. Son

D. Brother

Question ID : 75322912763

Q.6 The given Venn diagram represents the number of people who know English, Marathi, Telugu and Hindi. How many people can speak Marathi, Hindi and Telegu?



Ans A. 7

B. 11

C. 10

D. 13

Question ID : 75322912770



Teachingninja.in

Q.7 Out of the given options, three are similar in a certain manner. However, one option is NOT like the other three. Select the option which is different from the rest.

Ans A. A

IMAGE



B. D

IMAGE



C. B

IMAGE



D. C

IMAGE



Question ID : 75322912773

Q.8 Select the option that is related to the third term on the same basis as the second term is related to the first term.

Encouragement: Victory :: Frustration: ?

Ans A. Failure

B. Anger

C. Anxiety

D. Stalemate

Question ID : 75322912760

Q.9 In the question a statement is given, followed by two conclusions, I and II. You have to consider the statements to be true even if it seems to be at variance from commonly known facts. You have to decide which of the given conclusions, if any, follows from the given statements.

Statement 1 : No kids are voters.

Conclusion I : All adults are voters.

Conclusion II : No voters are kids.

- Ans
- A. Both conclusion I and II follow
 - B. Either conclusion I or II follows
 - C. Only conclusion II follows
 - D. Only conclusion I follows

Question ID : 75322912766

Q.10 Four friends Ajay, Biren, Chandu, Dinesh are sitting at the corners of a square facing towards the centre. Another person Eshan is sitting at the centre facing only Chandu and Ajay is sitting facing the back of Eshan. If Dinesh is sitting on the right of Eshan, what will be Biren's position according to Eshan?

- Ans
- A. Biren is sitting on the left of Eshan.
 - B. Biren is sitting on the right of Eshan.
 - C. Ajay is facing Biren and Eshan.
 - D. Biren is sitting at the back of Eshan.

Question ID : 75322912765

Q.11 Out of the given options, three are similar in a certain manner. However, one option is NOT like the other three. Select the option which is different from the rest.

- Ans
- A. APBQ
 - B. EUFV
 - C. GWHX
 - D. CRDT

Question ID : 75322912759

Q.12 In the question one statement is given, followed by two assumptions, I and II. You have to consider the statements to be true even if it seems to be at variance from commonly known facts. You have to decide which of the given assumptions, if any, follows from the given statement.

Statement: " Unemployment allowance should be given to all unemployed youth in India above 21 years of age."

Assumption: I : The government has sufficient funds to provide allowance to all unemployed youth.

Assumption II : There are unemployed youth in India who need monetary support.

- Ans
- A. Both I and II are implicit
 - B. Neither I nor II is implicit
 - C. Only assumption II is implicit
 - D. Only assumption I is implicit

Question ID : 75322912767

Q.13 Select the option that is related to the third term on the same basis as the second term is related to the first term.

Austria: Euro :: China : ?

- Ans A. Yuan
 B. Rial
 C. Won
 D. Peso

Question ID : 75322912761

Q.14 Among 5 friends, Viraj is taller than Manoj, but not as tall as Rajesh. Jayesh is taller than Dhruv but shorter than Manoj. Who is the tallest of them all?

- Ans A. Manoj
 B. Jayesh
 C. Rajesh
 D. Viraj

Question ID : 75322912764

Q.15 Arrange the following words as per order in the dictionary

1. haemostasis
2. haematite
3. haemoglobin
4. haemophilia

- Ans A. 2, 1, 4, 3
 B. 2, 3, 4, 1
 C. 1, 4, 3, 2
 D. 2, 4, 3, 1

Question ID : 75322912758

Q.16 Select the option that is related to the third term on the same basis as the second term is related to the first term.

365: 90 :: 623: ?

- Ans A. 45
 B. 36
 C. 63
 D. 123

Question ID : 75322912769

Q.17 How many maximum number of squares are there in the given question figure?

- Ans A. 19
 B. 18
 C. 25
 D. 27

Question ID : 75322912776

Q.18 Which answer figure will complete the pattern in the question figure?

Ans A. B

IMAGE

B. D

IMAGE

C. A

IMAGE

D. C

IMAGE

Question ID : 75322912772

Q.19 Which of the following answer figures completes the series of the question figure?

Ans A. D

IMAGE

B. C

IMAGE

C. B

IMAGE

D. A

IMAGE

Question ID : 75322912774

Q.20 Complete the following letter series:

a_b_caa_ac_aba_aabac

Ans A. ababc

B. aabcb

C. aabab

D. aabac

Question ID : 75322912757

Section : General Awareness

Q.1 Which Indian won the award for the best documentary at the 74th Cannes Film Festival?

Ans A. Amrita Singh

B. Satyajit Ray

C. Payal Kapadia

D. Koyal rai

Question ID : 75322912792

Q.2 The biggest river island in the world is _____.

Ans A. Srirangam

B. Bhola Island

C. Majuli

D. Umananda

Question ID : 75322912786

Q.3 Select the name of the first country in the world to adopt 'bitcoin' as legal tender?

- Ans A. Pakistan
 B. Afghanistan
 C. Italy
 D. El Salvador

Question ID : 75322912790

Q.4 Which delta is the world's largest delta, it is in South Asia area of Bangladesh and India?

- Ans A. Godavari Delta
 B. Indus River Delta
 C. Fly Delta
 D. Ganges Delta

Question ID : 75322912784

Q.5 English Channel separates the _____.

- Ans A. Southern Italy from northern France
 B. Southern England from northern France
 C. Southern Switzerland from northern France
 D. Southern Germany from northern France

Question ID : 75322912785

Q.6 In Liveability Index Survey 2020, which city ranks as the most liveable city in India?

- Ans A. Maharashtra
 B. Bengaluru
 C. Chennai
 D. Delhi

Question ID : 75322912779

Q.7 India stands at the _____ spot among the top 100 countries that have been ranked in the Global Start-up Ecosystem Index 2021.

- Ans A. 46th
 B. 34th
 C. 13th
 D. 20th

Question ID : 75322912780

Q.8 The National Flag of India has an Ashoka chakra also known as the Samay chakra in which there are _____ spokes.

- Ans A. 22
 B. 28
 C. 26
 D. 24

Question ID : 75322912793

Q.9 Which airline won the "Air Transport World's Airline" of the Year Award(2021)?

- Ans A. Air China
 B. Korean Air
 C. Finnair
 D. Qatar Airways

Question ID : 75322912791

Q.10 Aluminium should not be used for cooking, why?

- Ans A. Aluminium is very costly
 B. Aluminium is very cheap
 C. Aluminium heats slowly and not easily reacts with acidic vegetables and foods
 D. Aluminium heats very quickly and easily reacts with acidic vegetables and foods

Question ID : 75322912782

Q.11 Rawanhattha is the _____.

- Ans A. Rajasthani dish
 B. Rajasthani folk musical instrument
 C. Rajasthani dress
 D. Rajasthani folk dance

Question ID : 75322912778

Q.12 Among the four options which one of them is not fermented food that naturally contain probiotics?

- Ans A. Apple cider vinegar
 B. Yogurt
 C. Pickles
 D. Kefir

Question ID : 75322912781

Q.13 Swadeshi movement was formally started from where?

- Ans A. Maharashtra
 B. Calcutta
 C. Punjab
 D. Delhi

Question ID : 75322912788

Q.14 Select the name of the folk dance of Kashmir, celebrated for the good weather of the spring season and also for merriment in the various festivals.

- Ans A. Naach
 B. Rouf
 C. Chailam
 D. Dumhal

Question ID : 75322912777

Q.15 The first session of the Indian National Congress was held in which year?

- Ans A. 1885
 B. 1888
 C. 1889
 D. 1875

Question ID : 75322912789

Q.16 Fructose which is a natural sugar is present in _____.

- Ans A. Plain yogurt
 B. Fruits
 C. Milk
 D. Spices

Question ID : 75322912783

Q.17 A chess piece, is any of the six different types of movable objects used on a chessboard to play the game of chess. Select the right number of movable objects.

- Ans A. 1 king, 1 queen, 2 rooks, 2 bishops, 4 knights, 6 pawns.
 B. 1 king, 1 queen, 1 rooks, 2 bishops, 3 knights, 8 pawns.
 C. 1 king, 1 queen, 2 rooks, 2 bishops, 2 knights, 8 pawns.
 D. 1 king, 1 queen, 1 rooks, 3 bishops, 2 knights, 8 pawns.

Question ID : 75322912795

Q.18 IAAF, is related to sports, IAAF stands for:

- Ans A. Inter Association of Athletics Federations
 B. International Association of Athletics Federations
 C. Indian Association of Athletics Federations
 D. International Association of Athletics Foundation

Question ID : 75322912796

Q.19 The duration of the term of the President of India is:

- Ans A. Six years
 B. Two years
 C. Five years
 D. Three years

Question ID : 75322912794

Q.20 The Second Battle of Panipat was fought, in which year?

- Ans A. 1536
 B. 1526
 C. 1555
 D. 1556

Question ID : 75322912787

Section : Arithmetic Ability

Q.1 The volume (in cm^3) of the largest right circular cone that can be cut off from a cube of edge 4.41 cm is_____.

- Ans A. 22.46
 B. 41.725
 C. 44.725
 D. 41.925

Question ID : 75322912813

Q.2 Rajan hikes up a hill at 5 kmph and comes down at 7 kmph. If the total time taken for the total journey is 6 hours, the distance between the hilltop and the foothills is _____.

- Ans A. 18.5 km
 B. 17.5 km
 C. 38 km
 D. 35 km

Question ID : 75322912810

Q.3 Which of the following numbers is divisible by 11?

- Ans A. 84228
 B. 88224
 C. 28248
 D. 42828

Question ID : 75322912798

Q.4 The salaries of A, B and C are in the ratio 7:3:5. If the increments of 15%, 20% and 25% are allowed in their salaries, then what will be the new ratio of their salaries?

- Ans A. 120:111:123
 B. 125:112:121
 C. 161:72:125
 D. 122:111:124

Question ID : 75322912807

Q.5 30 men or 50 women can do a work in 72 days. How long will 15 men and 25 women take to do it?

- Ans A. 72 days
 B. 48 days
 C. 60 days
 D. 84 days

Question ID : 75322912811

Q.6 The average height of a family of five is 160 cm. If the heights of 4 family members is 155cm, 160cm, 161cm and 150cm, find the height of the fifth member.

- Ans A. 162cm
 B. 174cm
 C. 170cm
 D. 164cm

Question ID : 75322912802

Q.7 During onward journey from Jalandhar to Ambala, a bus travels at an average speed of 54 kmph, while on return journey, the bus is able to average a speed of 46 kmph. The average speed of the bus on its entire journey is _____.

- Ans A. 50 kmph(approx)
 B. 45 kmph(approx)
 C. 40 kmph (approx)
 D. 42 kmph (approx)

Question ID : 75322912809

Q.8 What is the curved surface area of a cylinder having radius M units and height N units?

- Ans A. $(\pi/2) MN$ sq.units
 B. MN sq.units
 C. $2\pi MN$ sq.units
 D. πMN sq.units

Question ID : 75322912812

Q.9

- Ans A. $83/2$
 B. $93/2$
 C. $63/2$
 D. $33/2$

Question ID : 75322912800

Q.10 The largest 4-digit number which leaves remainder 13 when divided by 5, 7, & 11 is

- Ans A. 9625
 B. 9638
 C. 9615
 D. 9612

Question ID : 75322912799

Q.11 If $3x = 5y$, then $(x+y) : (x - y) =$ _____.

- Ans A. 7:3
 B. 4:1
 C. 2:5
 D. 3:7

Question ID : 75322912804

Q.12 The graph shows rate and sale in kg on some day of four fruits. If that day due to huge demand of papaya its rate per kg increased by Rs. 20 , and of Apple increased by Rs. 15 then the which fruit will generate more sale in terms of money?

- Ans A. apple
 B. grapes
 C. papaya
 D. mango

Question ID : 75322912815

Q.13

- Ans A. 2
 B. 1
 C. 3
 D. 0

Question ID : 75322912797

Q.14 Write 0.00625 as percentage.

- Ans A. 0.605%
 B. 6.025%
 C. 0.625%
 D. 6.25%

Question ID : 75322912803

Q.15

- Ans A. 112:27
 B. 27:25
 C. 25:112
 D. 112:25

Question ID : 75322912806

Q.16 A shopkeeper mixes 36 kg of rice at Rs. 25 per kg with 40 kg of rice of other variety at Rs. 45 per kg and sells the mixture at Rs. 40 per kg. His profit percent is_____.

- Ans A. 12
 B. 12.6
 C. 12.4
 D. 12.8

Question ID : 75322912805

Q.17 Marks obtained by four students X, Y, Z and O in online and offline tests are shown below. Which student recorded maximum fall of marks in terms of percentage from online to offline?

- Ans A. X
 B. Y
 C. O
 D. Z

Question ID : 75322912816

Q.18 Smallest three digit number divisible by 5,15 & 25 is _____.

- Ans A. 175
 B. 150
 C. 125
 D. 225

Question ID : 75322912801

Q.19 The pie-chart represents the annual income of four brothers A, B, C, and D. Find the central angle corresponding to B in degrees.

- Ans A. 62.06
 B. 60.26
 C. 58
 D. 56

Question ID : 75322912814

Q.20 Find the simple interest on Rs. 98,000 at 8.4% per annum for a period of 6 months?

- Ans A. Rs.4236
 B. Rs.4216
 C. Rs.4126
 D. Rs.4116

Question ID : 75322912808

Section : General English

Q.1 Select the word that is similar in meaning (SYNONYM) to the word given below

disenable

- Ans A. assist
 B. assuage
 C. soothe
 D. cripple

Question ID : 75322912826

Q.2 Four words are given, out of which only one word is spelt correctly. Choose the correctly spelt word.

- Ans A. conoisiseur
 B. connoiseur
 C. connoisiseur
 D. connoisseur

Question ID : 75322912827

Q.3 Some parts of a sentence have been jumbled up, and labelled P, Q, R and S. Select the option that gives the correct sequence in which these parts can be rearranged to form a meaningful and grammatically correct sentence.

Swindon is suffering
P. more considerate
Q. encampments, although
R. a plague of illegal
S. some gypsies are
than others.

- Ans
- A. PSQR
 - B. RPSQ
 - C. PRSQ
 - D. RQSP

Question ID : 75322912824

Q.4 Select the word segment that substitutes (replaces) the bracketed word segment correctly and completes the sentence meaningfully. Select the option 'no correction required' if the sentence is correct as given.

(If she were involved in business, she would make) a strong chief executive.

- Ans
- A. No correction required
 - B. If she was involving in the business, she would make
 - C. If only she was involved in business, then only she would make
 - D. If she was being involved in the business, she would have made

Question ID : 75322912820

Q.5 Fill in the blank with the most appropriate choice

Smallpox was a very ancient _____ related to, and possibly deriving from, one of the various animal poxes.

- Ans
- A. purge
 - B. demiurge
 - C. resurge
 - D. scourge

Question ID : 75322912822

Q.6 The sentence below has been divided into three parts. Select the part of the sentence that has an error. If the sentence has no error, select the option 'No Error'.

Hardly did I got/ into the house/ when the phone rang.

- Ans
- A. No Error
 - B. when the phone rang.
 - C. Hardly did I got
 - D. into the house

Question ID : 75322912818

Q.7 Select the most appropriate 'one word' for the expressions given below

A devoted supporter of a group, cause, or person

- Ans
- A. Zeal
 - B. Veracity
 - C. Partisan
 - D. Tacit

Question ID : 75322912831

Q.8 The sentence below has been divided into three parts. Select the part of the sentence that has an error. If the sentence has no error, select the option 'No Error'.

No sooner had I uttered the/ words that I kicked myself,/ for I knew they would displease him.

- Ans
- A. words that I kicked myself,
 - B. No Error
 - C. for I knew they would displease him.
 - D. No sooner had I uttered the

Question ID : 75322912817

Q.9 Some parts of a sentence have been jumbled up, and labelled P, Q, R and S. Select the option that gives the correct sequence in which these parts can be rearranged to form a meaningful and grammatically correct sentence.

Retributivists, who seem
P. circumstances in which the
Q. infliction of suffering is a good
R. thing in itself, are charged
S. to hold that there are
by their opponents with vindictive barbarousness.

- Ans
- A. SRQP
 - B. SPRQ
 - C. SPQR
 - D. SQRP

Question ID : 75322912823

Q.10 Fill in the blank with the most appropriate choice

If you can't reach the floor, use a pillow or _____ to prop up your feet.

- Ans
- A. bolster
 - B. master
 - C. burgeon
 - D. foster

Question ID : 75322912821

Q.11 Select the word that is opposite in meaning (ANTONYM) to the word given below

nemesis

- Ans
- A. rival
 - B. earnest
 - C. associate
 - D. plague

Question ID : 75322912825

Q.12 Select the word segment that substitutes (replaces) the bracketed word segment correctly and completes the sentence meaningfully. Select the option 'no correction required' if the sentence is correct as given.

(Mexico and Philippines have both concluded agreements with) their commercial bank creditors.

- Ans
- A. The Mexico and the Philippines have both concluded agreements by
 - B. Mexico and the Philippines have both concluded agreements with
 - C. Mexico and Philippines have both concluded agreements from
 - D. No correction required

Question ID : 75322912819

Q.13 Four words are given, out of which only three words are spelt correctly. Choose the one spelt incorrectly.

- Ans
- A. sedulous
 - B. asthetic
 - C. solicitous
 - D. soporific

Question ID : 75322912828

Q.14 Select the most appropriate idiom of the given meaning

Someone who takes a position for the sake of argument without believing in that

- Ans
- A. Devil's advocate
 - B. Every cloud has a silver lining
 - C. Fire and brimstone
 - D. Ethnic cleansing

Question ID : 75322912830

Q.15 Select the most appropriate meaning of the given idiom

Keep your chin up

- Ans
- A. Quickly doing things results in a poor ending
 - B. You frequently see the same people in different places
 - C. A personal intuition you get, especially when feel something may not be right
 - D. To remain joyful in a tough situation

Question ID : 75322912829

Comprehension:

Read the passage carefully and choose the best answer to each question out of the four alternatives.

Blue jeans are casual pants noted for their strength and comfort. Blue jeans in the form we know them today didn't come about until the middle of the nineteenth century. Levi Strauss, an enterprising immigrant who happened to have a few bolts of blue denim cloth on hand, recognized a need for strong work pants in the mining communities of California. He first designed and marketed "Levi's" in 1850 and there has been only minor alteration to the original design since then. Blue jeans started becoming popular among young people in the 1950s. In the year 1957, 150 million pairs were sold worldwide. This growing trend continued until 1981. Although blue jeans have remained basically the same since they were first designed, they have always been versatile enough to meet market demands.

SubQuestion No : 16

Q.16 When did the blue jeans started becoming popular?

- Ans A. 1850s
 B. 1970s
 C. 1920s
 D. 1950s

Question ID : 75322912833

Comprehension:

Read the passage carefully and choose the best answer to each question out of the four alternatives.

Blue jeans are casual pants noted for their strength and comfort. Blue jeans in the form we know them today didn't come about until the middle of the nineteenth century. Levi Strauss, an enterprising immigrant who happened to have a few bolts of blue denim cloth on hand, recognized a need for strong work pants in the mining communities of California. He first designed and marketed "Levi's" in 1850 and there has been only minor alteration to the original design since then. Blue jeans started becoming popular among young people in the 1950s. In the year 1957, 150 million pairs were sold worldwide. This growing trend continued until 1981. Although blue jeans have remained basically the same since they were first designed, they have always been versatile enough to meet market demands.

SubQuestion No : 17

Q.17 Which of the following is not an attribute of denim jeans when they were first introduced ?

- Ans A. Fashion choice
 B. Comfort
 C. Casualness
 D. Durability

Question ID : 75322912835

Comprehension:

Read the passage carefully and choose the best answer to each question out of the four alternatives.

Blue jeans are casual pants noted for their strength and comfort. Blue jeans in the form we know them today didn't come about until the middle of the nineteenth century. Levi Strauss, an enterprising immigrant who happened to have a few bolts of blue denim cloth on hand, recognized a need for strong work pants in the mining communities of California. He first designed and marketed "Levi's" in 1850 and there has been only minor alteration to the original design since then. Blue jeans started becoming popular among young people in the 1950s. In the year 1957, 150 million pairs were sold worldwide. This growing trend continued until 1981. Although blue jeans have remained basically the same since they were first designed, they have always been versatile enough to meet market demands.

SubQuestion No : 18

Q.18 According to the passage, which of the following option is incorrect? Choose one option.

- Ans** A. Denim jeans started becoming popular in the 1950s as the youth became a major part of the target market.
- B. Lee Cooper was the first denim jeans designed and marketed by Levi Strauss.
- C. There has been only one alteration to the original design of Levi's jeans.
- D. In 1957, Levi's sold over 150 million pairs of jeans worldwide.

Question ID : 75322912836

Comprehension:

Read the passage carefully and choose the best answer to each question out of the four alternatives.

Blue jeans are casual pants noted for their strength and comfort. Blue jeans in the form we know them today didn't come about until the middle of the nineteenth century. Levi Strauss, an enterprising immigrant who happened to have a few bolts of blue denim cloth on hand, recognized a need for strong work pants in the mining communities of California. He first designed and marketed "Levi's" in 1850 and there has been only minor alteration to the original design since then. Blue jeans started becoming popular among young people in the 1950s. In the year 1957, 150 million pairs were sold worldwide. This growing trend continued until 1981. Although blue jeans have remained basically the same since they were first designed, they have always been versatile enough to meet market demands.

SubQuestion No : 19

Q.19 It is stated in the passage that blue jeans _____.

- Ans** A. have gone through a transformation period of various different cloth being introduced
- B. were first introduced under the brand name of Levi's in 1950
- C. have remained basically the same since they were first made
- D. were initially designed as functional pants for the youth

Question ID : 75322912837

Comprehension:

Read the passage carefully and choose the best answer to each question out of the four alternatives.

Blue jeans are casual pants noted for their strength and comfort. Blue jeans in the form we know them today didn't come about until the middle of the nineteenth century. Levi Strauss, an enterprising immigrant who happened to have a few bolts of blue denim cloth on hand, recognized a need for strong work pants in the mining communities of California. He first designed and marketed "Levi's" in 1850 and there has been only minor alteration to the original design since then. Blue jeans started becoming popular among young people in the 1950s. In the year 1957, 150 million pairs were sold worldwide. This growing trend continued until 1981. Although blue jeans have remained basically the same since they were first designed, they have always been versatile enough to meet market demands.

SubQuestion No : 20**Q.20 What purpose did the original denim jeans serve?**

- Ans A. Durable work pants
 B. Safety pants
 C. Fashionable pants
 D. Formal pants

Question ID : 75322912834

Section : General Hindi

Q.1 निम्नलिखित प्रश्न में, चार विकल्पों में से, उस विकल्प का चयन करें जो दिए गए वाक्य के काल का सही विकल्प हो।

वह समाचार देख रहा था।

- Ans A. संदिग्ध भूतकाल
 B. अपूर्ण भूतकाल
 C. तात्कालिक वर्तमानकाल
 D. सामान्य भविष्यकाल

Question ID : 75322912845

Q.2 निम्नलिखित प्रश्न में, चार विकल्पों में से, उस विकल्प का चयन करें जो दी गई मुहावरे का सही अर्थ वाला विकल्प है।

पीठ ठोकना -

- Ans A. हिम्मत देना
 B. बहाना करना
 C. आदत छोड़ना
 D. सहायता करना

Question ID : 75322912851

Q.3 निम्नलिखित प्रश्न में, चार विकल्पों में से, उस विकल्प का चयन करें जो भाववाचक संज्ञा का सही विकल्प नहीं है।

- Ans A. भारीपन
 B. दासता
 C. खोजना
 D. पात्रता

Question ID : 75322912840

Q.4 निम्नलिखित प्रश्न में, चार विकल्पों में से, उस विकल्प का चयन करें जो दिए गए वाक्य के लिए पक्ष के भेद का सबसे अच्छा विकल्प है।
अब तक बच्चे काफी घूम चुके हैं!

- Ans A. नित्यताद्योतक
 B. अभ्यासद्योतक
 C. पूर्णताद्योतक
 D. सातप्यबोधक

Question ID : 75322912848

Q.5 निम्नलिखित प्रश्न में, चार विकल्पों में से, उस विकल्प का चयन करें जो विराम चिह्न युक्त वाक्य का सही विकल्प हो।

- Ans A. वर्णों के आधार पर संधि के तीन भेद होते हैं- "स्वर संधि, व्यंजन संधि और विसर्ग संधि"
 B. वर्णों के आधार पर संधि के तीन भेद होते हैं- स्वर संधि व्यंजन संधि और विसर्ग संधि
 C. वर्णों के आधार पर संधि के तीन भेद होते हैं स्वर संधि, व्यंजन संधि और विसर्ग संधि
 D. वर्णों के आधार पर संधि के तीन भेद होते हैं- स्वर संधि, व्यंजन संधि और विसर्ग संधि

Question ID : 75322912849

Q.6 निम्नलिखित प्रश्न में, चार विकल्पों में से, उस सही विकल्प का चयन करें जो दिए गए शब्द-युग्म के सही अर्थ का उचित विकल्प हो।
वरण-वरन्

- Ans A. डर-बल्कि
 B. चुनना-विस्तृत
 C. चुनना-बल्कि
 D. विस्तृत-बल्कि

Question ID : 75322912843

Q.7 निम्नलिखित प्रश्न में, चार विकल्पों में से, उस विकल्प का चयन करें जो शुद्ध शब्द का सही विकल्प है।

- Ans A. वमगिनी
 B. वामागिनी
 C. वामांगिनी
 D. वामंगीनी

Question ID : 75322912842

Q.8 निम्नलिखित प्रश्न में, चार विकल्पों में से, उस विकल्प का चयन करें जो कोष्ठक में दिए गए शब्द के अनुसार विशेषण के भेद वाला विकल्प हो।
दोनों ने (वैसा) ही किया और घर लौट आएँ।

- Ans A. संबंधवाचक
 B. सार्वनामिक
 C. संख्यावाचक
 D. गुणवाचक

Question ID : 75322912839

Q.9 निम्नलिखित प्रश्न में, चार विकल्पों में से, उस विकल्प का चयन करें जो दिए गए लोकोक्ति का सही अर्थ वाला विकल्प है।

आधा तीतर आधा बटेर -

- Ans A. अनमेल मिश्रण
 B. विपत्ति में आना
 C. अनिश्चितता होना
 D. लाभ की आशा न होना

Question ID : 75322912850

Q.10 निम्नलिखित प्रश्न में, चार विकल्पों में से, उस विकल्प का चयन करें जो देशज शब्द का सही विकल्प हो।

- Ans A. आवाज़
 B. खिड़की
 C. आलमारी
 D. मशहूर

Question ID : 75322912838

Q.11 निम्नलिखित प्रश्न में, चार विकल्पों में से, उस विकल्प का चयन करें जो दी गई मुहावरे का सही अर्थ वाला विकल्प है।

पानी पीकर जात पूछना

- Ans A. जीवन निर्वाह करना
 B. काम करके फिर जानकारी लेना
 C. बेइज्जत करना
 D. मुसीबत आना

Question ID : 75322912852

Q.12 निम्नलिखित प्रश्न में, चार विकल्पों में से, उस विकल्प का चयन करें जो सही वाक्य भेद का विकल्प हो।
तुम अगर अपना काम पूरा कर लो तो हम खेलने जा सकते हैं।

- Ans A. निषेधवाचक वाक्य
 B. विधानवाचक वाक्य
 C. संदेहवाचक वाक्य
 D. संयुक्त वाक्य

Question ID : 75322912847

Q.13 निम्नलिखित प्रश्न में, चार विकल्पों में से, उस विकल्प का चयन करें जो दिए गए वाक्य के लिए वृत्ति के भेद का सबसे अच्छा विकल्प है।

उनका खेल खत्म हो चुका होगा।

- Ans A. विध्यर्थ
 B. सम्भावनार्थ
 C. निश्चयार्थ
 D. संदेहार्थ

Question ID : 75322912846

Q.14 निम्नलिखित प्रश्न में, चार विकल्पों में से, उस सही विकल्प का चयन करें जो दिए गए शब्द के सही अर्थ का उचित विकल्प नहीं है।
धरती

- Ans A. मनुज
 B. पृथ्वी
 C. अचला
 D. मही

Question ID : 75322912841

Q.15 निम्नलिखित प्रश्न में, चार विकल्पों में से, उस सही विकल्प का चयन करें जो रिक्त स्थान के लिए उपयुक्त शब्द का सही विकल्प है।
विद्या से _____ व्यक्ति का जीवन दूभर हो जाता है, वह दूसरों के लिए भार बन जाता है।

- Ans A. प्रथम
 B. विहीन
 C. अर्जित
 D. भरपूर

Question ID : 75322912844

Comprehension:

नीचे दिए गये गद्यांश को ध्यानपूर्वक पढ़ें और चार विकल्पों में से प्रत्येक प्रश्न का सर्वोत्तम उत्तर चुनें।

सत्संग से लौकिक और पारलौकिक दोनों प्रकार के सुख प्राप्त होते हैं। यदि कोई मनुष्य इस जीवन में दुखी रहता है तो कम से कम कुछ समय के लिए श्रेष्ठ पुरुषों की संगति में वह अपने सांसारिक दुखों का विस्मरण कर देता है। महापुरुषों के उपदेश सदैव सुख शांति प्रदान करते हैं। दुख के समय मनुष्य जिनका स्मरण करके धीरज प्राप्त करता है। सत्संग में लीन रहने वाले मनुष्य को दुखों का भय नहीं रहता है। वह अपने दिल को समझता है, जिससे दुखों का कोई कारण ही शेष नहीं रह जाता। सत्संग के प्रभाव से धैर्य का लाभ होता है जिससे मन में क्षमा की शक्ति स्वयं ही आ जाती है। क्षमा सभी प्रकार के दुर्गुणों का विनाश कर देती है और मन को शांति व संतोष प्रदान करती है।

SubQuestion No : 16

Q.16 दुख के समय मनुष्य किसका स्मरण करके धीरज प्राप्त करता है?

- Ans A. जीवन के दुखी पलों का
 B. महापुरुषों के उपदेश का
 C. जीवन के अच्छे पलों का
 D. परिवार वालों का

Question ID : 75322912855

Comprehension:

नीचे दिए गये गद्यांश को ध्यानपूर्वक पढ़ें और चार विकल्पों में से प्रत्येक प्रश्न का सर्वोत्तम उत्तर चुनें।

सत्संग से लौकिक और पारलौकिक दोनों प्रकार के सुख प्राप्त होते हैं। यदि कोई मनुष्य इस जीवन में दुखी रहता है तो कम से कम कुछ समय के लिए श्रेष्ठ पुरुषों की संगति में वह अपने सांसारिक दुखों का विस्मरण कर देता है। महापुरुषों के उपदेश सदैव सुख शांति प्रदान करते हैं। दुख के समय मनुष्य जिनका स्मरण करके धीरज प्राप्त करता है। सत्संग में लीन रहने वाले मनुष्य को दुखों का भय नहीं रहता है। वह अपने दिल को समझता है, जिससे दुखों का कोई कारण ही शेष नहीं रह जाता। सत्संग के प्रभाव से धैर्य का लाभ होता है जिससे मन में क्षमा की शक्ति स्वयं ही आ जाती है। क्षमा सभी प्रकार के दुर्गुणों का विनाश कर देती है और मन को शांति व संतोष प्रदान करती है।

SubQuestion No : 17

Q.17 इनमें से कौन-सा स्मरण का विलोम शब्द है?

- Ans A. विस्मरण
 B. स्मृति
 C. याद
 D. यश

Question ID : 75322912857

Comprehension:

नीचे दिए गये गद्यांश को ध्यानपूर्वक पढ़ें और चार विकल्पों में से प्रत्येक प्रश्न का सर्वोत्तम उत्तर चुनें।

सत्संग से लौकिक और पारलौकिक दोनों प्रकार के सुख प्राप्त होते हैं। यदि कोई मनुष्य इस जीवन में दुखी रहता है तो कम से कम कुछ समय के लिए श्रेष्ठ पुरुषों की संगति में वह अपने सांसारिक दुखों का विस्मरण कर देता है। महापुरुषों के उपदेश सदैव सुख शांति प्रदान करते हैं। दुख के समय मनुष्य जिनका स्मरण करके धीरज प्राप्त करता है। सत्संग में लीन रहने वाले मनुष्य को दुखों का भय नहीं रहता है। वह अपने दिल को समझता है, जिससे दुखों का कोई कारण ही शेष नहीं रह जाता। सत्संग के प्रभाव से धैर्य का लाभ होता है जिससे मन में क्षमा की शक्ति स्वयं ही आ जाती है। क्षमा सभी प्रकार के दुर्गुणों का विनाश कर देती है और मन को शांति व संतोष प्रदान करती है।

SubQuestion No : 18

Q.18 इस अनुच्छेद का कोई उपयुक्त शीर्षक-

- Ans A. संगति का महत्व
 B. शांति व संतोष
 C. दुखों का कारण
 D. सत्संग में लीन

Question ID : 75322912858

Comprehension:

नीचे दिए गये गद्यांश को ध्यानपूर्वक पढ़ें और चार विकल्पों में से प्रत्येक प्रश्न का सर्वोत्तम उत्तर चुनें।

सत्संग से लौकिक और पारलौकिक दोनों प्रकार के सुख प्राप्त होते हैं। यदि कोई मनुष्य इस जीवन में दुखी रहता है तो कम से कम कुछ समय के लिए श्रेष्ठ पुरुषों की संगति में वह अपने सांसारिक दुखों का विस्मरण कर देता है। महापुरुषों के उपदेश सदैव सुख शांति प्रदान करते हैं। दुख के समय मनुष्य जिनका स्मरण करके धीरज प्राप्त करता है। सत्संग में लीन रहने वाले मनुष्य को दुखों का भय नहीं रहता है। वह अपने दिल को समझता है, जिससे दुखों का कोई कारण ही शेष नहीं रह जाता। सत्संग के प्रभाव से धैर्य का लाभ होता है जिससे मन में क्षमा की शक्ति स्वयं ही आ जाती है। क्षमा सभी प्रकार के दुर्गुणों का विनाश कर देती है और मन को शांति व संतोष प्रदान करती है।

SubQuestion No : 19

Q.19 सत्संग के प्रभाव से मन में किसकी शक्ति स्वयं ही आ जाती है?

- Ans A. धैर्य की
 B. विनाश की
 C. शांति की
 D. क्षमा की

Question ID : 75322912856

Comprehension:

नीचे दिए गये गद्यांश को ध्यानपूर्वक पढ़ें और चार विकल्पों में से प्रत्येक प्रश्न का सर्वोत्तम उत्तर चुनें।

सत्संग से लौकिक और पारलौकिक दोनों प्रकार के सुख प्राप्त होते हैं। यदि कोई मनुष्य इस जीवन में दुखी रहता है तो कम से कम कुछ समय के लिए श्रेष्ठ पुरुषों की संगति में वह अपने सांसारिक दुखों का विस्मरण कर देता है। महापुरुषों के उपदेश सदैव सुख शांति प्रदान करते हैं। दुख के समय मनुष्य जिनका स्मरण करके धीरज प्राप्त करता है। सत्संग में लीन रहने वाले मनुष्य को दुखों का भय नहीं रहता है। वह अपने दिल को समझता है, जिससे दुखों का कोई कारण ही शेष नहीं रह जाता। सत्संग के प्रभाव से धैर्य का लाभ होता है जिससे मन में क्षमा की शक्ति स्वयं ही आ जाती है। क्षमा सभी प्रकार के दुर्गुणों का विनाश कर देती है और मन को शांति व संतोष प्रदान करती है।

SubQuestion No : 20

Q.20 श्रेष्ठ पुरुषों की संगति में मनुष्य किसे भूल जाता है?

- Ans A. सांसारिक दुखों को
 B. सत्संग को
 C. संसार को
 D. परिवार को

Question ID : 75322912854

Section : Discipline1

Q.1 According to which psychologist, the childhood stage of life is called as the latency stage?

- Ans A. Jean Piaget
 B. Erikson
 C. E. L. Thorndike
 D. Sigmund Freud

Question ID : 75322912866

Q.2 Which of the following is not one of the characteristics of adolescence stage?

- Ans A. Unrealism
 B. Aspirations beyond reach
 C. Emotional instability
 D. Imitate parents

Question ID : 75322912861

Q.3 As per Erickson's theory of Psycho Social Development, at which stage individual takes important steps and becomes responsible towards work and family?

- Ans A. Middle Adulthood
 B. Maturity
 C. Young Adulthood
 D. Adolescence

Question ID : 75322912878

Q.4 Which of the following is the age group for adolescents?

- Ans A. 21-24 years
 B. 19-21 years
 C. 9-12 years
 D. 12- 18 years

Question ID : 75322912859

Q.5 In Piaget's Theory of Cognition Development, which of the following is the appropriate stage for development of memory and imagination?

- Ans A. Sensory motor stage
 B. Concrete operational stage
 C. Formal operational stage
 D. Pre Operational stage

Question ID : 75322912869

Q.6 According to Erik Erikson's theory of Psycho Social Development, Intimacy vs Isolation begins in which stage?

- Ans A. Later childhood
 B. Middle Adulthood
 C. Young Adulthood
 D. Maturity

Question ID : 75322912876

Q.7 The child fully develops his fine motor skills at which stage?

- Ans A. Infancy stage
 B. Adolescence stage
 C. New born
 D. Early childhood

Question ID : 75322912863

Q.8 Which of the following is the basic virtue in Autonomy Vs Shame in Erikson's theory of Psycho Social Development?

- Ans A. Competency
 B. Will
 C. Purpose
 D. Hope

Question ID : 75322912865

Q.9 Which psychologist introduced the affective domain of learning?

- Ans A. Krathwohl
 B. Simpson
 C. Spencer
 D. Benjamin Bloom

Question ID : 75322912870

Q.10 Who divided the Psychomotor domain into seven levels?

- Ans A. Harrow
 B. Simpson
 C. Dave
 D. Spinster

Question ID : 75322912872

Q.11 Which of the following does not fall into the 3H given by Mahatma Gandhi in Basic Education?

- Ans A. Hand
 B. Holistic
 C. Heart
 D. Head

Question ID : 75322912871

Q.12 Which one of these is not the agent of socialization?

- Ans A. School Building
 B. Peer group
 C. Family
 D. Mass Media

Question ID : 75322912877

Q.13 Which of the following is not the component of the cognition?

- Ans A. Thought
 B. Memory
 C. Language
 D. Realism

Question ID : 75322912867

Q.14 Socialization is related to:

- Ans A. Rote learning
 B. Scoring in formative assessments
 C. Textbooks
 D. Culture and society

Question ID : 75322912875

Q.15 The Early childhood stage is also known as:

- Ans A. Toy age
 B. Later stage
 C. Maturity age
 D. Pre - infancy stage

Question ID : 75322912864

Q.16 During which stage does the child learn to identify members of the family and imitate them?

- Ans A. Pre-natal stage
 B. Infancy stage
 C. Childhood stage
 D. Adulthood stage

Question ID : 75322912860

Q.17 Which one of these is the primary and proximate source of socialisation for child?

- Ans A. Playground
 B. School
 C. Friend
 D. Family

Question ID : 75322912874

Q.18 Primary socialization of a child takes place in:

- Ans A. Family
 B. School
 C. Neighborhood
 D. Friends

Question ID : 75322912873

Q.19 According to cognition, mark the odd one related to mental process.

- Ans A. Problem solving
 B. Judging
 C. Knowing
 D. Day Dreaming

Question ID : 75322912868

Q.20 Which of the following age is defined as aging adulthood?

- Ans A. Below 46 years
 B. Above 60 years
 C. 21-35 years
 D. Below 55 years

Question ID : 75322912862

Section : Discipline2

Q.1 The Indian Education commission of 1882 was appointed by _____

- Ans A. Lord Rippon
 B. Lord Macaulay
 C. William Bentinck
 D. Lord Curzon

Question ID : 75322912886

Q.2 The word curriculum is derived from which of the following languages?

- Ans A. Greek
 B. Italian
 C. Spanish
 D. Latin

Question ID : 75322912893

Q.3 During Vedic period, education was considered as:

- Ans A. Source of money
 B. Source of heat
 C. Source of water
 D. Source of knowledge

Question ID : 75322912884

Q.4 As per the traditional examination system which of the following domains is given less importance?

- Ans A. Cognitive
 B. Affective
 C. Holistic
 D. Psychomotor

Question ID : 75322912896

Q.5 During ancient time, the education was provided in which of the following places?

- Ans A. School buildings
 B. Online
 C. Gurukuls
 D. Playground

Question ID : 75322912881

Q.6 Which of the following term is used for those having a trouble in writing?

- Ans A. Asphasia
 B. Dyscalculia
 C. Dyslexia
 D. Dysgraphia

Question ID : 75322912892

Q.7 Which of these is the main objective of inclusive education?

- Ans A. Special need teacher
 B. Special education classroom
 C. Resource room availability
 D. Education for all learner

Question ID : 75322912891

Q.8 All of the following are the purpose of WOMEN RESERVATION BILL except

- Ans A. more diversity in representation
 B. reduce power and respect of men
 C. take a step towards more equal society
 D. empower women

Question ID : 75322912887

Q.9 In Buddhist education system, the students had to follow which of the following ritual to get admission in higher level of education?

- Ans A. Upsamapda ritual
 B. Tol Ritual
 C. Nirvana Ritual
 D. Pabja Ritual

Question ID : 75322912883

Q.10 Through which of the following paths did Buddhists attain Nirvana?

- Ans A. Sevenfold paths
 B. Sixfold paths
 C. Nine fold path
 D. Eightfold path

Question ID : 75322912885

Q.11 Which of the these is not the approach to curriculum development?

- Ans A. Humanistic approach
 B. Unrealism approach
 C. Behavioural approach
 D. System approach

Question ID : 75322912897

Q.12 Which of the following difficulty prevails in dyslexia?

- Ans A. Language difficulty
 B. Writing difficulty
 C. Reading difficulty
 D. Mathematical difficulty

Question ID : 75322912889

Q.13 According to Ralph Tyler's model, which of these not important for curriculum development

- Ans A. Purpose of the school
 B. Educational experiences
 C. Evaluation of the experience
 D. Infrastructure

Question ID : 75322912894

Q.14 The disability related to spoken language and communication skills where child face problem in communication is known as_____ -

- Ans A. Dysgraphia
 B. Dysphasia
 C. Dyspraxia
 D. Dyscalculia

Question ID : 75322912890

Q.15 The factors that influence socialisation process includes:

- Ans A. Interaction
 B. Gender stereotypes
 C. Mental ability
 D. Spiritual ability

Question ID : 75322912880

Q.16 What is the other name of Hilda Taba model of curriculum Development?

- Ans A. Evaluation approach
 B. Inductive approach
 C. Synthesis approach
 D. Grass root approach

Question ID : 75322912898

Q.17 Which of the following is an important factor of curriculum achievement?

- Ans A. Objective
 B. Popularity of curriculum
 C. Co-curricular activities only
 D. Timely completion of course

Question ID : 75322912895

Q.18 "Girls must be more polite than the boys". This statement refers to:

- Ans A. Biasness
 B. Gender stereotypes
 C. Superstitions
 D. Social Evil

Question ID : 75322912888

Q.19 Usually members in the peer group are of:

- Ans A. Same age
 B. Same height
 C. Same colour
 D. Same economic status

Question ID : 75322912879

Q.20 The word Education is derived from:

- Ans A. Latin
 B. Spanish
 C. German
 D. Greek

Question ID : 75322912882

Section : Discipline3

Q.1 Language acquisition device was given by:

- Ans A. Vygotsky
 B. Erikson
 C. Piaget
 D. Chomsky

Question ID : 75322912908

Q.2 Which of the following is not an ideal technique of developing numeracy skills among primary children?

- Ans A. Rote learning
 B. Sorting
 C. Ordering
 D. Classification

Question ID : 75322912916

Q.3 Application of ICT in education includes:-

- Ans A. Textbook
 B. Video conferencing
 C. Notes making
 D. Flash cards on chart paper

Question ID : 75322912902

Q.4 Which of the following methods is appropriate to teach English language by physical activities?

- Ans A. Teaching English by songs
 B. Teaching English by games
 C. Long term memory method
 D. Total physical response method

Question ID : 75322912915

Q.5 What do you mean by blended learning?

- Ans A. Distance learning
 B. Online learning
 C. Classroom learning
 D. Combination of classroom and e-learning

Question ID : 75322912903

Q.6 The principle of using vowels can be best taught through:-

- Ans A. Structural approach
 B. Communication approach
 C. Inductive - deductive approach
 D. Grammar translation

Question ID : 75322912909

Q.7 The Mental method of teaching generally includes:-

- Ans
- A. Traditional approach
 - B. Textbooks
 - C. Rote learning
 - D. Inductive reasoning

Question ID : 75322912906

Q.8 When does the summative assessment take place?

- Ans
- A. After learning
 - B. In between learning
 - C. Half before and half held after learning
 - D. Before teaching

Question ID : 75322912905

Q.9 What is the way by which students, who are visual learners, can easily understand mathematics?

- Ans
- A. Knowledge
 - B. Pictorial presentation
 - C. Textbook
 - D. Remembering

Question ID : 75322912917

Q.10 Which of the following is not the correct way for teaching mathematics at primary level?

- Ans
- A. Observation
 - B. Problem solving
 - C. Rote learning
 - D. Engagement

Question ID : 75322912918

Q.11 HTML is the link created within which of the following?

- Ans
- A. Internet
 - B. WebPages
 - C. Data
 - D. Web links

Question ID : 75322912901

Q.12 Which is the most difficult skill of language development?

- Ans
- A. Listening
 - B. Writing
 - C. Reading
 - D. Speaking

Question ID : 75322912914

Q.13 Which of the following factor does not affect language development?

- Ans A. Autonomy v/s shame
 B. Relationship with peers
 C. Family relations
 D. Personality

Question ID : 75322912913

Q.14 Which of the following is not the use of ICT?

- Ans A. Education
 B. Administration
 C. Rote learning
 D. Art

Question ID : 75322912904

Q.15 the first large-scale implementation of Internet technologies in a complex environment of many independently operated networks was:

- Ans A. ARPANET
 B. NSF
 C. INTERNET
 D. NSFNET

Question ID : 75322912900

Q.16 The best school culture will not be driven by:

- Ans A. Community
 B. High fee
 C. Parents
 D. Staff

Question ID : 75322912899

Q.17 The structural method of learning a language does not include:

- Ans A. Communication method
 B. Audio- lingual method
 C. Grammar - translation method
 D. Idioms

Question ID : 75322912910

Q.18 Which of the following language skills are considered as active skills?

- Ans A. Listening and reading
 B. Listening and writing
 C. Speaking and reading
 D. Speaking and writing

Question ID : 75322912907

Q.19 Language is the ability to_____

- Ans A. Teach
 B. Dictate
 C. Completion of curriculum
 D. Communicate

Question ID : 75322912912

Q.20 The silent way technique is used in which method?

- Ans A. Direct method
 B. Inductive - Deductive method
 C. Functional method
 D. Structural method

Question ID : 75322912911

Section : Discipline4

Q.1 Which of the following helps the most to teach environmental studies at primary level?

- Ans A. School building
 B. Classmates
 C. Community
 D. Family

Question ID : 75322912923

Q.2 Observation method used in teaching does not form the basis for:

- Ans A. Learning
 B. Critical thinking
 C. Application
 D. Understanding

Question ID : 75322912922

Q.3 Which of the following is related to NEP 2020?

- Ans A. Dr. K Kasturirangan Committee report
 B. Kothari commission
 C. Basic education
 D. None of the given options

Question ID : 75322912935

Q.4 Which is not the best way to teach environment studies at primary stages?

- Ans A. Chalk and talk method
 B. Cooperative learning approach
 C. Collaborative approach
 D. Activity based teaching approach

Question ID : 75322912921

Q.5 According to CBSE, which of the following classes focus on skill programme?

- Ans A. 6-12 class
 B. 8-11 class
 C. 4-10 class
 D. 2-5 class

Question ID : 75322912932

Q.6 How to teach fraction to primary class students?

- Ans A. Rote learning
 B. Picture presentation of different spaces
 C. Textbook method
 D. Chalk and talk method

Question ID : 75322912919

Q.7 What is the main idea behind the skill and vocational courses in schools?

- Ans A. To increase the fee
 B. Cognitive enhancement
 C. Holistic development
 D. Better evaluation

Question ID : 75322912933

Q.8 Best way to teach addition to students is:

- Ans A. Traditional method
 B. Activity method
 C. Textbook method
 D. Rote learning

Question ID : 75322912920

Q.9 Which of the following is not the agent of socialization?

- Ans A. Peers
 B. Community
 C. Family
 D. Oneself

Question ID : 75322912937

Q.10 How to teach solar system to grade 3rd students?

- Ans A. Discussion method
 B. Interview method
 C. Chalk and talk method
 D. Thematic approach

Question ID : 75322912930

Q.11 Which of the following is not the practical objective of curriculum proposed by NCERT?

- Ans A. Skill among learners
 B. Rote memorization
 C. Develop logical thinking
 D. Awareness about social facts

Question ID : 75322912928

Q.12 The scope of art education focuses on:

- Ans A. Cognition stimulation
 B. Holistic development
 C. More aesthetical
 D. affective domain

Question ID : 75322912931

Q.13 The new policy regarding vocational and skill programme was launched in?

- Ans A. 2019
 B. 2020
 C. 2024
 D. 2022

Question ID : 75322912934

Q.14 According to Vygotsky, which of the following helps in self regulation of the child?

- Ans A. Inter personal speech
 B. Social speech
 C. Private speech
 D. Ego centric speech

Question ID : 75322912936

Q.15 In primary classes, curriculum should be more of :-

- Ans A. Teacher-centred education
 B. Technology - centred education
 C. Classroom - centred education
 D. Child-centred education

Question ID : 75322912926

Q.16 According to NCF 2005, which of the following is not the best way to engage learner in environmental studies?

- Ans
- A. Technical jargons
 - B. Thematic approach
 - C. Constructivism
 - D. Learner centred activity

Question ID : 75322912925

Q.17 If you want to teach parts of plant in classroom, which technique you should follow?

- Ans
- A. Power point presentation
 - B. Draw parts of plant on board
 - C. Live small plant
 - D. Show chart paper

Question ID : 75322912924

Q.18 Which of the following is not the main focus of art in the subject?

- Ans
- A. Uses of all senses
 - B. Longer visualization
 - C. Better retention
 - D. Rote learning

Question ID : 75322912929

Q.19 The planning of social science curriculum at higher level must be:

- Ans
- A. Job oriented vocational courses
 - B. Evaluation purpose
 - C. Rote learning
 - D. Traditional approach

Question ID : 75322912927

Q.20 Which of the following is not a way to promote social skill in schools?

- Ans
- A. Play performance in school
 - B. Collaborative learning
 - C. Community participation
 - D. Social exclusion

Question ID : 75322912938

Section : Discipline5

Q.1 Which of the following is not the meaning of identity?

- Ans
- A. Sense of who we are
 - B. Our thought process
 - C. Economic status
 - D. Beliefs of a person

Question ID : 75322912954

Q.2 What is the purpose of physical education in schools?

- Ans
- A. Mental development
 - B. Physical development
 - C. Leisure time
 - D. Both Mental development and Physical development

Question ID : 75322912943

Q.3 Which of the following can enable the children to discover their real interests and aptitudes which would be helpful to them in selecting suitable courses of study and occupations later on?

- Ans
- A. Moral education
 - B. Health education
 - C. Environment education
 - D. Work education

Question ID : 75322912952

Q.4 What is the least effective way here to get the maximum participation of students in school health program?

- Ans
- A. Volunteer programme
 - B. Textbook reading
 - C. Orientation
 - D. Fun learning activities

Question ID : 75322912944

Q.5 School education program does not promote:

- Ans
- A. Gender stereotyping
 - B. Mental health
 - C. Physical health
 - D. Sexual education

Question ID : 75322912945

Q.6 In case a student is not performing well, what should a teacher do?

- Ans A. Not give importance to the child
 B. Counselling
 C. delete the difficult chapters for the student
 D. Give less homework to the whole class

Question ID : 75322912941

Q.7 How can we teach sex education in schools?

- Ans A. Through textbooks only
 B. Not relevant for students
 C. Teaching boys and girls together in the same session
 D. Teaching boys and girls in separate sessions

Question ID : 75322912940

Q.8 All of the following can be done to nurture positive self concept of a child, except:

- Ans A. Provide them with opportunities for success.
 B. Set reasonable rules and enforce them with loving kindness.
 C. Tell them that they are 'lazy' or 'naughty' when they behave badly.
 D. Show children that you have faith in their goodness and in their abilities.

Question ID : 75322912955

Q.9 Which of the following is not the main important aspect of teacher in school culture?

- Ans A. Finance policy
 B. School's excellence
 C. Holistic development of the children
 D. Community development

Question ID : 75322912957

Q.10 The concept inservice education / training of teacher does not include:

- Ans A. Workshops
 B. Incentives for extra efforts
 C. Using stagnant teaching aids
 D. Skill upgradation programme

Question ID : 75322912956

Q.11 Which is the best time for physical activity in school?

- Ans A. Assembly time
 B. After class hours
 C. Before class work
 D. In between period slots

Question ID : 75322912947

Q.12 Which one of the following is not an outcome of work education?

- Ans A. Enhanced performance in classwork
 B. Self - reliance
 C. Dedication to duty
 D. Respect for manual work

Question ID : 75322912950

Q.13 Which criteria should not be adopted for selection of activities under work education?

- Ans A. Performance in class
 B. Manual work
 C. Mental ability
 D. Age appropriate

Question ID : 75322912951

Q.14 Which of the following criteria should not be adopted during committee formation in school health system?

- Ans A. Medical staff
 B. Inclusive participation
 C. Teacher
 D. Gender of the students

Question ID : 75322912946

Q.15 What is the approximate age of puberty among students?

- Ans A. 12- 19 years
 B. 6-12 years
 C. 15-16 years
 D. Above 18 years

Question ID : 75322912942

Q.16 Which of the following is not the way to involve community in school management?

- Ans A. Give them participation
 B. Marginalization
 C. Skill development programme for community
 D. Community volunteer programme

Question ID : 75322912958

Q.17 According to you, for child health in school which mode of play you adopt?

- Ans A. Indoor games
 B. Outdoor activities
 C. Online games
 D. Mix of indoor as well as outdoor

Question ID : 75322912948

Q.18 How can we develop socialization among students in circumstances like COVID-19?

- Ans**
- A. Weekly PTA meetings in school campus
 - B. Study groups of students can meet after school hours at one of the student's residence.
 - C. virtual weekly meeting with students
 - D. Weekly classes for students in Schools campus

Question ID : 75322912939

Q.19 Work education in curriculum leads to:

- Ans**
- A. Cognition development
 - B. Psychomotor domain
 - C. Holistic development
 - D. Affective domain

Question ID : 75322912949

Q.20 Which of the following is not the criteria for effective implementation of work education in school?

- Ans**
- A. Scheme of the year
 - B. Teacher orientation
 - C. Selection of activity at instant
 - D. Available funds

Question ID : 75322912953

