



Teachingninja.in

DSSSB PRT 24 March 2022 Shift 2 Paper

-  **Latest Govt Job updates**
-  **Private Job updates**
-  **Free Mock tests available**

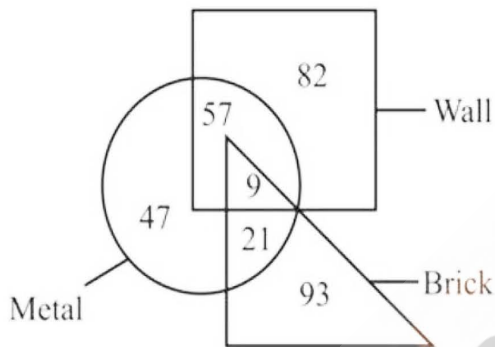
Visit - teachingninja.in

Test Date	24/03/2022
Test Time	12:30 PM - 2:30 PM
Subject	ASSISTANT TEACHER PRIMARY

Section : Mental Ability

Q.1 Based on the given venn diagram, which of the following statement(s) is/are correct?

- I. The number of metals which are both brick and wall is 9.
- II. The number of walls which are not brick is 129.



- Ans
- A. Only I
 - B. Both I and II
 - C. Only II
 - D. Neither I nor II

Question ID : 1034357194

Q.2 A series is given with one term missing. Select the correct alternative from the given ones that will complete the series.
Z49, D90, H131, L172, P213, ?

- Ans
- A. S254
 - B. T254
 - C. T244
 - D. S244

Question ID : 1034357180

Q.3 In the following question below are given some statements followed by some conclusions based on those statements. Taking the given statements to be true even if they seem to be at variance from commonly known facts. Read all the conclusions and then decide which of the given conclusion logically follows the given statements.

Statements:

I. All P are S.

II. All P are Q.

Conclusions:

I. Some Q are S.

II. All S are Q.

- Ans A. Both conclusion I and II follows
- B. Only conclusion I follows
- C. Only conclusion II follows
- D. Neither conclusion follows

Question ID : 1034357189

Q.4 In the following question, select the odd word from the given alternatives.

- Ans A. Trapezium
- B. Circle
- C. Square
- D. Rectangle

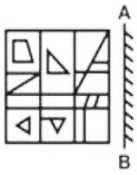
Question ID : 1034357182

Q.5 Six persons P1, P2, P3, P4, P5 and P6 have different salary. The salary of P2 is more than the salary of P4 and P6. The salary of P1 is less than the salary of P3. The salary of P4 is more than the salary of P5. The salary of P2 is less than the salary of P1. The salary of P5 is more than the salary of P6. Who has the fourth lowest salary?

- Ans A. P5
- B. P2
- C. P1
- D. P4

Question ID : 1034357186

Q.6 If a mirror is placed on the line AB, then which of the answer figures is the right image of the given figure?



Ans

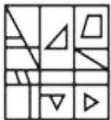
✓ A.



✗ B.



✗ C.



✗ D.



Question ID : 1034357199

Q.7 Eight girls A, B, C, D, E, F, G and H sit in a row facing towards the north (not necessarily in the same order). Four girls sit between D and H. Two girls sit between H and B. G sits third to the left of A. E is the neighbour of D. F sits third to the right of C. B sits to the immediate left of A. Which of the following statement is correct?

- I. C and E sit at the extreme ends.
- II. Two girls sit between B and C.

Ans ✗ A. Only II

✓ B. Only I

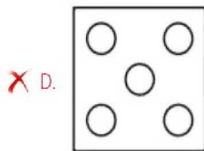
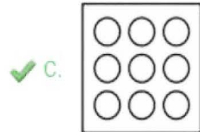
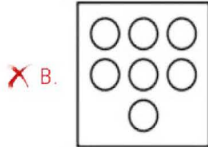
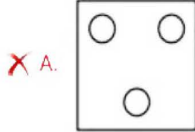
✗ C. Both I and II

✗ D. Neither I nor II

Question ID : 1034357188

Q.8 In the following question, select the odd figure from the given alternatives.

Ans



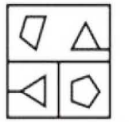
Question ID : 1034357197

Q.9 Seven persons A, B, C, D, E, F and G live on seven different floors of a building. The lower most floor is numbered 1, the floor above it is numbered 2 and so on. No two persons live on same floor. Two persons live between A and D. A lives above D. One person lives between B and G. Two persons lives between G and F. C lives above E but not just above E. B live on the third floor. Who lives on the sixth floor?

- Ans
- A. G
 - B. A
 - C. C
 - D. E

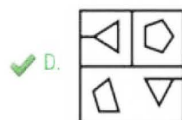
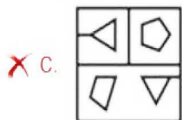
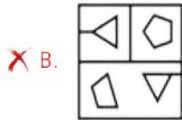
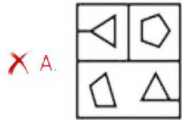
Question ID : 1034357187

Q.10 If a mirror is placed on the line AB, then which of the answer figures is the right image of the given figure?



A B

Ans



Question ID : 1034357198

Q.11 A series is given with one term wrong. Select that wrong term from the given alternatives.

5, 17, 37, 65, 99, 145

Ans A. 37

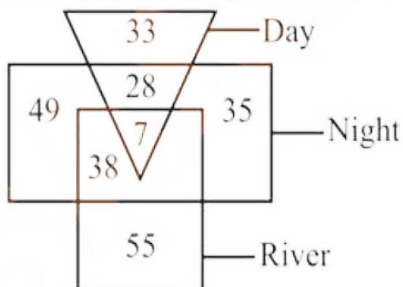
B. 99

C. 65

D. 145

Question ID : 1034357191

Q.12 How many nights are days, but not rivers?



Ans A. 28

B. 35

C. 112

D. 119

Question ID : 1034357193

Q.13 In the following question, select the related word pair from the given alternatives.
Paper : Pulp :: ?

- Ans A. Furniture : Brick
 B. Leather : Shoes
 C. Gold : Jewellery
 D. Metal : Ore

Question ID : 1034357184

Q.14 A series is given with one term wrong. Select that wrong term from the given alternatives.
ZCM, EIT, JOA, OUH, TAP, YGV

- Ans A. EIT
 B. OUH
 C. YGV
 D. TAP

Question ID : 1034357181

Q.15 In a certain code language, 'he is bad' is written as '& # \$', 'is you bad girl' is written as '@ \$ # +', 'girl is going' is written as '# @ *'. What is the code for 'you going' in that code language?

- Ans A. # +
 B. * \$
 C. + @
 D. **

Question ID : 1034357185

Q.16 In the following question below are given some statements followed by some conclusions based on those statements. Taking the given statements to be true even if they seem to be at variance from commonly known facts. Read all the conclusions and then decide which of the given conclusion logically follows the given statements.

Statements:

- I. Some A are D.
II. All A are F.
III. Some F are G.

Conclusions:

- I. Some A are G.
II. Some D are F.
III. Some G are D.

- Ans A. Neither conclusion follows
 B. Only conclusion II follows
 C. Only conclusion III follows
 D. Only conclusion I follows

Question ID : 1034357190

Q.17 Raman walks 25 metre towards the south. He turns to the left and walks 40 metre. He turns to the left and walks 60 metre. He turns to the right and walks 20 metre. He turns to the right and walks 35 metre. Finally, he turns to the left and walks 19 metre. Which of the following statement is correct?
I. The starting point is 79 metre to the west of the finishing point.
II. After fourth turn, Raman will face towards the south.

- Ans A. Only I
 B. Only II
 C. Neither I nor II
 D. Both I and II

Question ID : 1034357196

Q.18 In the following question, a group of letters is given. The letters of each group are related with the letters of the same group by some Logic/Rule/Relation. From the given alternatives, select a group of letters which follows the same Logic/Rule/Relation.
(EP, FR, GT)

- Ans A. (AF, BH, CJ)
 B. (QS, RU, SX)
 C. (JL, KM, LO)
 D. (ZC, AE, BF)

Question ID : 1034357183

Q.19 Raman and Naman start walking in opposite direction from point A. Raman walks 4 km and Naman walks 5 km. Raman turns to the right and walks 6 km. While Naman turns to the left and walks 6 km. What is the distance between Raman and Naman now?

- Ans A. 12 km
 B. 5 km
 C. 23 km
 D. 9 km

Question ID : 1034357195

Q.20 In the following question, select the odd group of numbers from the given alternatives.

- Ans A. (73, 197, 345)
 B. (67, 191, 339)
 C. (131, 255, 403)
 D. (29, 153, 299)

Question ID : 1034357192

Section : General Awareness

Q.1 Nizam – Ul – Mulk Asaf Jah, was the founder of state _____.

Ans A. Hyderabad

B. Delhi

C. Bengal

D. Awadh

Question ID : 1034357211

Q.2 Headquarter of IUCN is situated in _____.

Ans A. Gland

B. Paris

C. Vienna

D. Nairobi

Question ID : 1034357214

Q.3 Which of the following element has maximum atomic radius?

Ans A. Na

B. Cs

C. Rb

D. Li

Question ID : 1034357204

Q.4 Who among the following person is also called 'Birdman of India'?

Ans A. Dr. Srikrishna Singh

B. C.F. Andrews

C. Ashutosh Mukherji

D. Dr. Salim Ali

Question ID : 1034357213

Q.5 Privatisation of the public sector enterprises by selling off part of the equity of PSEs to the public is known as _____.

Ans A. Liberalisation

B. Investment

C. Disinvestment

D. Globalisation

Question ID : 1034357202

Q.6 Which of the following state will host Khelo India Youth Games 2021 (to be played in February 2022)?

- Ans A. Goa
 B. Manipur
 C. Odisha
 D. Haryana

Question ID : 1034357219

Q.7 In which of the following archaeological site 'Dockyard' was found?

- Ans A. Harappa
 B. Lothal
 C. Kalibangan
 D. Mohenjodaro

Question ID : 1034357210

Q.8 Which pair of monument - state is correct?

- Ans A. Gingee Fort - Karnataka
 B. Victoria Memorial - Punjab
 C. Bahai Temple - Himachal Pradesh
 D. Mehrangarh Fort - Rajasthan

Question ID : 1034357201

Q.9 Manika Batra is associated with which sports?

- Ans A. Tennis
 B. Football
 C. Table Tennis
 D. Cricket

Question ID : 1034357218

Q.10 Which of the following statement is correct?

- I. A landmass bounded by sea on three sides is called peninsula.
II. The highest peak in the Eastern ghat is Anai Mudi.

- Ans A. Only I
 B. Neither I nor II
 C. Only II
 D. Both I and II

Question ID : 1034357209

Q.11 In April 2021, who among the following has been selected as external auditor for OPCW?

- Ans A. Shri Manoj Kumar
 B. Pragati Singh
 C. G.C. Murmu
 D. Ratnish Mahajan

Question ID : 1034357215

Q.12 Zaskar is a tributary of _____ river.

- Ans A. Indus
 B. Brahmaputra
 C. Godavari
 D. Krishna

Question ID : 1034357208

Q.13 Melting point of chloroform is _____.

- Ans A. 309 K
 B. 409 K
 C. 209 K
 D. 509 K

Question ID : 1034357205

Q.14 Average height of Inner Himalayas is _____.

- Ans A. 6000 metres
 B. 8000 metres
 C. 5000 metres
 D. 4000 metres

Question ID : 1034357207

Q.15 Which of the following statement is correct?

- I. Method of making compost from kitchen garbage using redworms is called vermicomposting.
II. Plastics cannot be converted into less harmful substances by the process of composting.

- Ans A. Both I and II
 B. Only II
 C. Only I
 D. Neither I nor II

Question ID : 1034357206

Q.16 Which pair of schedule in Indian constitution – subject is correct?

- I. First schedule – The state
- II. Eighth schedule – Language

- Ans
- A. Only I
 - B. Both I and II
 - C. Neither I nor II
 - D. Only II

Question ID : 1034357217

Q.17 "Lotia" is a regional music of which state?

- Ans
- A. Chhattisgarh
 - B. Uttar Pradesh
 - C. Goa
 - D. Rajasthan

Question ID : 1034357200

Q.18 The colour of new Rs. 2000 note in the Mahatma Gandhi (new) series is _____.

- Ans
- A. Magenta
 - B. Red
 - C. Green
 - D. Stone grey

Question ID : 1034357203

Q.19 Which of the following is NOT a fundamental right mentioned in constitution of India?

- Ans
- A. Right against exploitation
 - B. Right to freedom
 - C. Right to property
 - D. Right to equality

Question ID : 1034357216

Q.20 Which of the following statement is correct?

- I. Nadir Shah plundered the city of Delhi in 1739.
- II. Ahmad Shah Abdali was a Afghan ruler.

- Ans
- A. Only I
 - B. Only II
 - C. Both I and II
 - D. Neither I nor II

Question ID : 1034357212

Section : Arithmetic Ability

Q.1 Rs. 70000 is divided among P, Q and R such that P's share is $\frac{2}{5}$ of total share of Q and R together and Q's share is $\frac{3}{7}$ of total share of P and R together. What is the share of R?

- Ans
- A. Rs. 9000
 - B. Rs. 19000
 - C. Rs. 39000
 - D. Rs. 29000

Question ID : 1034357229

Q.2 Some boys can complete a work in 46 days. If there were 26 boys more, then the work could be finished in 26 days less. What was the number of boys in the beginning?

- Ans
- A. 20
 - B. 17
 - C. 18
 - D. 10

Question ID : 1034357234

Q.3 A sum of Rs. 10000 is invested in a scheme of simple interest. The rate of interest in this scheme is 20 percent per annum. If Rs. 4000 interest is obtained, then for how many months is the sum invested?

- Ans
- A. 28 months
 - B. 30 months
 - C. 18 months
 - D. 24 months

Question ID : 1034357231

Q.4 A person can cover a distance of y km in 10 hours. He increases his speed by 10 m/s and covers the same distance in 4 hours. Which of the following statement(s) is/are correct?

- I. The value of y is 240.
- II Original speed of the person is 24 km/hr.

- Ans
- A. Only I
 - B. Neither I nor II
 - C. Both I and II
 - D. Only II

Question ID : 1034357233

Q.5 The population of a district is 150000. 60 percent of the population is literate. 75000 of the population are females. If 80 percent females are literate, then how many men are literate?

- Ans
- A. 50000
 - B. 30000
 - C. 60000
 - D. 75000

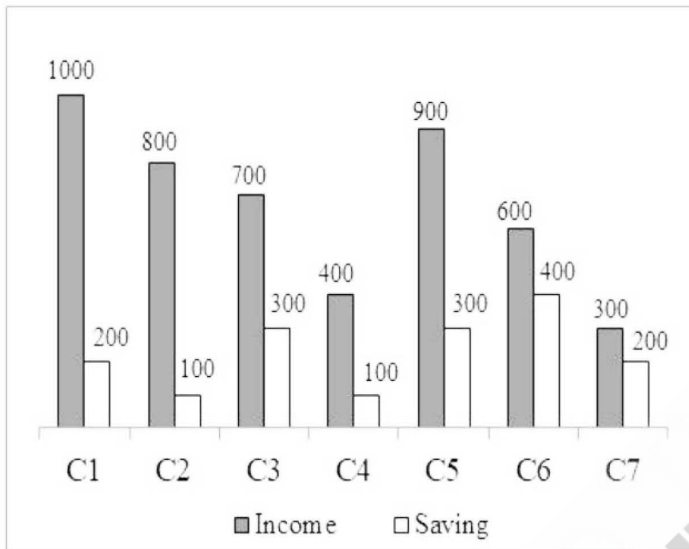
Question ID : 1034357227

Q.6 If the number 9871Y is exactly divisible by 9, then what can be the value of Y?

- Ans
- A. 5
 - B. 4
 - C. 3
 - D. 2

Question ID : 1034357221

Q.7 The bar graph given below shows the income and saving of 7 different companies.



Expenditure = Income - Saving

Which of the following statement is correct?

- I. The average of income of companies C2, C3 and C6 is 700.
- II. The sum of expenditure of all the 7 companies is 3100.
- III. The difference between total expenditure and total saving of all 7 companies is 1500.

- Ans
- A. I, II and III
 - B. I and II
 - C. II and III
 - D. I and III

Question ID : 1034357239

Q.8 Area of a regular hexagon is $150\sqrt{3}$ cm². What is the side of this regular hexagon?

- Ans
- A. 12 cm
 - B. 15 cm
 - C. 10 cm
 - D. 16 cm

Question ID : 1034357235

Q.9 What is the digit at the unit place $(11^{96} \times 33^{92} \times 55^{60})$?

- Ans A. 6
 B. 8
 C. 5
 D. 0

Question ID : 1034357224

Q.10 Selling price of an article is Rs. 1452 and discount of 12 percent is offered. What is the marked price of the article?

- Ans A. Rs. 1600
 B. Rs. 1650
 C. Rs. 1780
 D. Rs. 1700

Question ID : 1034357225

Q.11 What is the value of $\frac{\sqrt{3}-\sqrt{2}}{\sqrt{3}+\sqrt{2}} + \frac{\sqrt{3}+\sqrt{2}}{\sqrt{3}-\sqrt{2}}$?

- Ans A. 18
 B. 9
 C. 5
 D. 10

Question ID : 1034357222

Q.12 A train crosses a pole in 17 seconds and a platform of length 440 metre in 37 seconds. What is the speed of train?

- Ans A. 24 m/s
 B. 32 m/s
 C. 28 m/s
 D. 22 m/s

Question ID : 1034357232

Q.13 The table given below shows the cost price and profit percentage of 6 articles.

Article	Cost price	Profit percentage
P	600	20
Q	700	30
R	550	10
S	400	40
T	300	50
U	800	15

Selling price = Cost price + (Cost price × Profit percentage)/100

J1 = The difference between cost price and selling price of all 6 articles.

J2 = The average of selling price of article P, Q, R, S and T.

What is the value of (J1 – J2)?

- Ans
- A. 182
 - B. 166
 - C. 178
 - D. 162

Question ID : 1034357237

Q.14 If a number is divided by 5, the remainder is 2, then what will be the remainder when square of the same number is divided by 5 again?

- Ans
- A. 2
 - B. 1
 - C. 3
 - D. 4

Question ID : 1034357223

Q.15 Radius of solid sphere is 14 cm. 6 times of the volume of this sphere is equal to the volume of solid cone. If the radius of base of cone is 28 cm, then what will be the height of this cone?

- Ans
- A. 63 cm
 - B. 42 cm
 - C. 21 cm
 - D. 84 cm

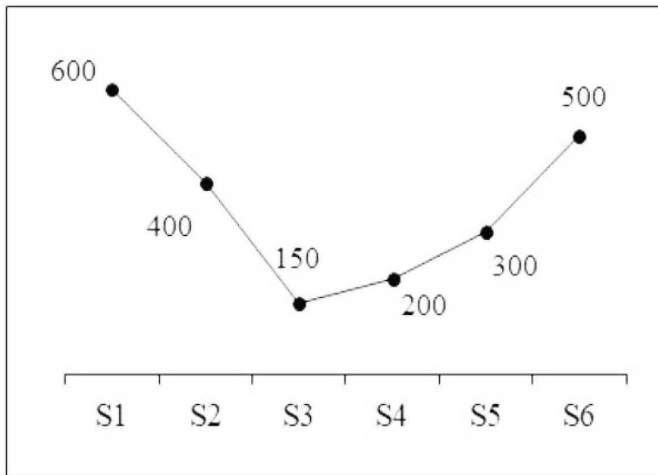
Question ID : 1034357236

Q.16 In a party hall, there are people in blue and red dresses. The ratio of number of men in blue to the number of women in red is 4 : 7. The ratio of men in red to the number of women in blue is 3 : 2. If the ratio of number of people in blue to the number of people in red is 106 : 176, then what is the ratio of number of men to the number of women?

- Ans
- A. 125 : 157
 - B. 112 : 125
 - C. 125 : 149
 - D. 132 : 91

Question ID : 1034357230

Q.17 The line chart given below shows the number of males teacher in 6 different schools.



The number of male teachers in S1 is what percentage of number of male teachers in S4?

- Ans A. 30 percent
 B. 300 percent
 C. 33.33 percent
 D. 66.66 percent

Question ID : 1034357238

Q.18 Ram had a loss of 12 percent by selling his cycle for Rs. 7744. If he sells it for Rs. 9000, then what would be the profit percent?

- Ans A. 2.5 percent
 B. 2.27 percent
 C. 6.66 percent
 D. 3.33 percent

Question ID : 1034357228

Q.19 What should be subtracted from 120 so that the number obtained will become equal to 50 percent of 70?

- Ans A. 65
 B. 85
 C. 75
 D. 94

Question ID : 1034357226

Q.20 What is the value of $88 \div 8 + 5 - 9 \div 3 \times 2$?

- Ans A. 8
 B. 10
 C. 12
 D. 11

Question ID : 1034357220

Section : General English

Q.1 A sentence has been given with a blank to be filled with an appropriate word. Choose the correct alternative.

The room in hotel was so _____ that I have to shift to another hotel.

- Ans
- A. pact
 - B. thin
 - C. adequate
 - D. compact

Question ID : 1034357244

Q.2 In the given question, four words are given out of which one word is correctly spelt. Choose the correctly spelt word.

- Ans
- A. Vantrilloquist
 - B. Ventrilloquist
 - C. Ventriloquist
 - D. Vantriloquist

Question ID : 1034357251

Q.3 Find the part of the given sentence that has an error in it. If there is no error, choose 'No error'.

It will be ludicrous not (1)/to acknowledge the real threats (2)/the world is facing right now (3)/.No error (4)

- Ans
- A. 3
 - B. 1
 - C. 4
 - D. 2

Question ID : 1034357241

Q.4 In the following question, out of the given four alternatives, select the alternative which best expresses the meaning of the Idiom/Phrase.

To have hollow legs

- Ans
- A. To lose weight
 - B. Not fond of travelling
 - C. To deny one's mistake
 - D. To have a large appetite

Question ID : 1034357253

Q.5 In the following question, out of the given four alternatives, select the alternative which best expresses the meaning of the Idiom/Phrase.

Lion hearted

- Ans
- A. Fearful
 - B. Emotional
 - C. Brave
 - D. Cunning

Question ID : 1034357252

Q.6 A sentence has been given with a blank to be filled with an appropriate word. Choose the correct alternative.

The jury _____ deciding how they want to judge.

- Ans
- A. has
 - B. was
 - C. are
 - D. will

Question ID : 1034357245

Q.7 Choose the word that can substitute the given sentence.
Chemistry in ancient times

- Ans
- A. Palaeology
 - B. Abysmal
 - C. Taxonomy
 - D. Alchemy

Question ID : 1034357254

Q.8 Find the part of the given sentence that has an error in it. If there is no error, choose 'No error'.

She said that (1)/ she had never (2)/tried that chocolate (3)/. No error (4)

- Ans
- A. 3
 - B. 1
 - C. 4
 - D. 2

Question ID : 1034357240

Q.9 Choose the word that is opposite in meaning to the given word.
Begrime

- Ans
- A. Crank
 - B. Bedaubing
 - C. Doubling
 - D. Clean

Question ID : 1034357249

Q.10 Choose the word that means the same as the given word.
Censure

- Ans
- A. Rebuke
 - B. Push
 - C. Heed
 - D. Instruct

Question ID : 1034357248

Q.11 Rearrange the parts of the sentence in correct order.

Here the rocks

P: So smooth that in places they

Q: Resemble rolls of silk

R: By ice and water

S: Are carved and polished

Ans A. SRPQ

B. QSRP

C. PQRS

D. QRPS

Question ID : 1034357246

Q.12 Select the most appropriate option to substitute the underlined segment in the given sentence. If no substitution is required, select 'No improvement' as your answer.

I have not been given the documents by Ramesh.

Ans A. have nor been given the documents via

B. has not been gave the documents by

C. have not been given the documents through

D. No improvement

Question ID : 1034357243

Q.13 In the given question, four words are given out of which one word is correctly spelt. Choose the correctly spelt word.

Ans A. Sollemnn

B. Solemn

C. Sollemn

D. Solem

Question ID : 1034357250

Q.14 Select the most appropriate option to substitute the underlined segment in the given sentence. If no substitution is required, select 'No improvement' as your answer.

He called to help if nobody came.

Ans A. No improvement

B. for help when

C. for help if

D. to help untill

Question ID : 1034357242

Q.15 Rearrange the parts of the sentence in correct order.

P: A page can have multiple lines.

Q: A page is better measure of length of a book.

R: This is with respect to a line.

S: It is important to differentiate a line from a page.

Ans A. SPQR

B. QRPS

C. SRPQ

D. RQPS

Question ID : 1034357247

Comprehension:

Read the following information carefully and answer the given questions.

The glass artist Sam Herman, who has died aged 84, was an important contributor to the British craft renaissance of the 1960s and 70s. Studio ceramics (ceramics designed and made by the same person) had been established as a new art form in Britain since the 20s but it was not until the mid-60s that Herman brought the technology to work with hot glass in studio to the UK from the US, enabling individual creative engagement with this dangerous but alluring medium. His mature work was characterised by powerful flowing forms with occasional figurative references and by vibrant colour and iridescent effects.

Herman appeared to work in an unpremeditated fashion, following his instincts, responding above all to the ductility of the medium. At the University of Wisconsin at Madison (1962-65) Herman had majored in sculpture under Leo Steppat and, more importantly, had taken glass courses with Harvey Littleton, a potter whose father had been head of research at the great Corning glass works, in upstate New York. But Littleton himself had seen small family-run workshops in Murano, Italy, and was attracted by the neoprimitive inter-war glass made by the French painter Maurice Marinot. With the technical help of Dominick Labino he set about creating a small tank furnace that made it possible for hot glass to be worked outside the factory environment. Herman arrived from Wisconsin on a Fulbright scholarship in 1965 to study cold glass techniques at Edinburgh College of Art, becoming an ambassador for hot glass made in studio. He organised a show of work by his fellow students and tutors from Wisconsin that toured from Edinburgh to Stourbridge College of Art, in the West Midlands, and to the Royal College of Art in London.

There it was seen by the head of the ceramics and glass department at the college, David Queensberry, who immediately recognised the potential of direct engagement with hot glass and invited Herman to become a research fellow. In 1966 Herman built a small tank furnace at the college and in 1967 became tutor in charge of a reconfigured glass department. The first degree show at the RCA that included student-made hot glass – by Pauline Solven, John Cook and Asa Brandt – took place in 1968.

SubQuestion No : 16

Q.16 Which word can replace the word 'alluring' meaningfully in the passage?

Ans A. Repelling

B. Enchanting

C. Abominable

D. Ponderous

Question ID : 1034357259

Comprehension:

Read the following information carefully and answer the given questions.

The glass artist Sam Herman, who has died aged 84, was an important contributor to the British craft renaissance of the 1960s and 70s. Studio ceramics (ceramics designed and made by the same person) had been established as a new art form in Britain since the 20s but it was not until the mid-60s that Herman brought the technology to work with hot glass in studio to the UK from the US, enabling individual creative engagement with this dangerous but alluring medium. His mature work was characterised by powerful flowing forms with occasional figurative references and by vibrant colour and iridescent effects. Herman appeared to work in an unpremeditated fashion, following his instincts, responding above all to the ductility of the medium. At the University of Wisconsin at Madison (1962-65) Herman had majored in sculpture under Leo Steppat and, more importantly, had taken glass courses with Harvey Littleton, a potter whose father had been head of research at the great Corning glass works, in upstate New York. But Littleton himself had seen small family-run workshops in Murano, Italy, and was attracted by the neoprimitive inter-war glass made by the French painter Maurice Marinot. With the technical help of Dominick Labino he set about creating a small tank furnace that made it possible for hot glass to be worked outside the factory environment. Herman arrived from Wisconsin on a Fulbright scholarship in 1965 to study cold glass techniques at Edinburgh College of Art, becoming an ambassador for hot glass made in studio. He organised a show of work by his fellow students and tutors from Wisconsin that toured from Edinburgh to Stourbridge College of Art, in the West Midlands, and to the Royal College of Art in London.

There it was seen by the head of the ceramics and glass department at the college, David Queensberry, who immediately recognised the potential of direct engagement with hot glass and invited Herman to become a research fellow. In 1966 Herman built a small tank furnace at the college and in 1967 became tutor in charge of a reconfigured glass department. The first degree show at the RCA that included student-made hot glass – by Pauline Solven, John Cook and Asa Brandt – took place in 1968.

SubQuestion No : 17

Q.17 According to the passage, all statements are correct EXCEPT :

- Ans
- A. In 1966, Herman became tutor in charge of a reconfigured glass department.
 - B. Before mid-60s there was no technology to work with hot glass in studio in the UK.
 - C. Harvey Littleton's father was the head of research at the great Corning glass works in New York.
 - D. Occasional figurative references were seen in the work of Herman.

Question ID : 1034357257



Comprehension:

Read the following information carefully and answer the given questions.

The glass artist Sam Herman, who has died aged 84, was an important contributor to the British craft renaissance of the 1960s and 70s. Studio ceramics (ceramics designed and made by the same person) had been established as a new art form in Britain since the 20s but it was not until the mid-60s that Herman brought the technology to work with hot glass in studio to the UK from the US, enabling individual creative engagement with this dangerous but alluring medium. His mature work was characterised by powerful flowing forms with occasional figurative references and by vibrant colour and iridescent effects. Herman appeared to work in an unpremeditated fashion, following his instincts, responding above all to the ductility of the medium. At the University of Wisconsin at Madison (1962-65) Herman had majored in sculpture under Leo Steppat and, more importantly, had taken glass courses with Harvey Littleton, a potter whose father had been head of research at the great Corning glass works, in upstate New York. But Littleton himself had seen small family-run workshops in Murano, Italy, and was attracted by the neoprimitive inter-war glass made by the French painter Maurice Marinot. With the technical help of Dominick Labino he set about creating a small tank furnace that made it possible for hot glass to be worked outside the factory environment. Herman arrived from Wisconsin on a Fulbright scholarship in 1965 to study cold glass techniques at Edinburgh College of Art, becoming an ambassador for hot glass made in studio. He organised a show of work by his fellow students and tutors from Wisconsin that toured from Edinburgh to Stourbridge College of Art, in the West Midlands, and to the Royal College of Art in London.

There it was seen by the head of the ceramics and glass department at the college, David Queensberry, who immediately recognised the potential of direct engagement with hot glass and invited Herman to become a research fellow. In 1966 Herman built a small tank furnace at the college and in 1967 became tutor in charge of a reconfigured glass department. The first degree show at the RCA that included student-made hot glass – by Pauline Solven, John Cook and Asa Brandt – took place in 1968.

SubQuestion No : 18

Q.18 As per the given information, which of the following pairs is incorrect?

- Ans
- A. Dominick Labino- Technician
 - B. Maurice Marinot- French painter
 - C. Asa Brandt- Head of Fashion Department
 - D. Harvey Littleton- Potter

Question ID : 1034357260



Comprehension:

Read the following information carefully and answer the given questions.

The glass artist Sam Herman, who has died aged 84, was an important contributor to the British craft renaissance of the 1960s and 70s. Studio ceramics (ceramics designed and made by the same person) had been established as a new art form in Britain since the 20s but it was not until the mid-60s that Herman brought the technology to work with hot glass in studio to the UK from the US, enabling individual creative engagement with this dangerous but alluring medium. His mature work was characterised by powerful flowing forms with occasional figurative references and by vibrant colour and iridescent effects. Herman appeared to work in an unpremeditated fashion, following his instincts, responding above all to the ductility of the medium. At the University of Wisconsin at Madison (1962-65) Herman had majored in sculpture under Leo Steppat and, more importantly, had taken glass courses with Harvey Littleton, a potter whose father had been head of research at the great Corning glass works, in upstate New York. But Littleton himself had seen small family-run workshops in Murano, Italy, and was attracted by the neoprimitive inter-war glass made by the French painter Maurice Marinot. With the technical help of Dominick Labino he set about creating a small tank furnace that made it possible for hot glass to be worked outside the factory environment. Herman arrived from Wisconsin on a Fulbright scholarship in 1965 to study cold glass techniques at Edinburgh College of Art, becoming an ambassador for hot glass made in studio. He organised a show of work by his fellow students and tutors from Wisconsin that toured from Edinburgh to Stourbridge College of Art, in the West Midlands, and to the Royal College of Art in London.

There it was seen by the head of the ceramics and glass department at the college, David Queensberry, who immediately recognised the potential of direct engagement with hot glass and invited Herman to become a research fellow. In 1966 Herman built a small tank furnace at the college and in 1967 became tutor in charge of a reconfigured glass department. The first degree show at the RCA that included student-made hot glass – by Pauline Solven, John Cook and Asa Brandt – took place in 1968.

SubQuestion No : 19

Q.19 Identify the correct statement about Sam Herman from the following.

I. He was a glass artist.

II. He studied sculpture at University of Wisconsin at Madison.

III. He arrived at Edinburgh College of Art to study cold glass techniques.

- Ans
- A. II and III
 - B. Only III
 - C. I, II and III
 - D. I and II

Question ID : 1034357258

Comprehension:

Read the following information carefully and answer the given questions.

The glass artist Sam Herman, who has died aged 84, was an important contributor to the British craft renaissance of the 1960s and 70s. Studio ceramics (ceramics designed and made by the same person) had been established as a new art form in Britain since the 20s but it was not until the mid-60s that Herman brought the technology to work with hot glass in studio to the UK from the US, enabling individual creative engagement with this dangerous but alluring medium. His mature work was characterised by powerful flowing forms with occasional figurative references and by vibrant colour and iridescent effects. Herman appeared to work in an unpremeditated fashion, following his instincts, responding above all to the ductility of the medium. At the University of Wisconsin at Madison (1962-65) Herman had majored in sculpture under Leo Steppat and, more importantly, had taken glass courses with Harvey Littleton, a potter whose father had been head of research at the great Corning glass works, in upstate New York. But Littleton himself had seen small family-run workshops in Murano, Italy, and was attracted by the neoprimitive inter-war glass made by the French painter Maurice Marinot. With the technical help of Dominick Labino he set about creating a small tank furnace that made it possible for hot glass to be worked outside the factory environment. Herman arrived from Wisconsin on a Fulbright scholarship in 1965 to study cold glass techniques at Edinburgh College of Art, becoming an ambassador for hot glass made in studio. He organised a show of work by his fellow students and tutors from Wisconsin that toured from Edinburgh to Stourbridge College of Art, in the West Midlands, and to the Royal College of Art in London.

There it was seen by the head of the ceramics and glass department at the college, David Queensberry, who immediately recognised the potential of direct engagement with hot glass and invited Herman to become a research fellow. In 1966 Herman built a small tank furnace at the college and in 1967 became tutor in charge of a reconfigured glass department. The first degree show at the RCA that included student-made hot glass – by Pauline Solven, John Cook and Asa Brandt – took place in 1968.

SubQuestion No : 20

Q.20 Who invited Herman to become a research fellow?

- Ans A. David Queensberry
 B. John Cook
 C. Harvey Littleton
 D. Maurice Marinot

Question ID : 1034357256

Section : General Hindi

Q.1 दिए गए शब्दों में शुद्ध वर्तनी का चयन कीजिए।

- Ans A. अस्पश्यता
 B. अस्पृश्यता
 C. अस्पृस्यता
 D. अस्पृष्यता

Question ID : 1034357267

Q.2 दिए गए शब्दों का सही तत्सम-तद्भव ज्ञान कीजिए।

- Ans A. घठ-ची
 B. घट-घड़ा
 C. घट-घाट
 D. घट-घटा

Question ID : 1034357263

Q.3 दिए गए वाक्य का पुरूष ज्ञात कीजिए।
तुम कल कहाँ थे?

- Ans A. प्रथम
 B. उत्तम
 C. मध्यम
 D. अन्य पुरूष

Question ID : 1034357268

Q.4 दिए गए वाक्य का काल ज्ञात कीजिए।
गाय घास चर कर चली गयी।

- Ans A. भविष्य काल
 B. वर्तमान
 C. भूतकाल
 D. प्राचीन काल

Question ID : 1034357271

Q.5 दिए गए शब्दों में शुद्ध वर्तनी का चयन कीजिए।

- Ans A. आहर
 B. अहर
 C. अहार
 D. आहार

Question ID : 1034357265

Q.6 दिए गए वाक्य में उपयुक्त विराम चिह्न का चयन कीजिए।
हम आकाश का वर्णन करते हैं पृथ्वी का वर्णन करते हैं पर कीचड़ का वर्णन कभी किसी ने किया है

- Ans A. ...
 B. ;!
 C. ^।
 D. , ?

Question ID : 1034357272

Q.7 निम्नलिखित प्रश्न में, दिए गए चार विकल्पों में से, उस विकल्प का चयन करें जो दिए गए मुहावरे के अर्थ को सर्वश्रेष्ठ रूप से व्यक्त करता है।
घोड़े पर चढ़े आना

- Ans A. मन ही मन खुश होना
 B. बहुत बड़ी आपत्ति आना
 C. असंभव-सा कार्य करना
 D. उतावली में आना

Question ID : 1034357274

Q.8 दिए गए शब्द का विलोम शब्द ज्ञात कीजिए।
सामिष

- Ans A. निरामिष
 B. आमिष
 C. व्यास
 D. वामिष

Question ID : 1034357264

Q.9 निम्नलिखित प्रश्न में, दिए गए चार विकल्पों में से, उस विकल्प का चयन करें जो दिए गए मुहावरे के अर्थ को सर्वश्रेष्ठ रूप से व्यक्त करता है।
खीसैं निपोरना

- Ans A. भला-बुरा कहना
 B. दर-दर भटकना
 C. गिड़गिड़ाकर माफी माँगना
 D. कड़ी मेहनत करना

Question ID : 1034357275

Q.10 निम्नलिखित वाक्यों में से सरल वाक्य ज्ञात कीजिए।

- Ans A. जैसे ही सुमिता ने पानी पीया और वह चली गई।
 B. सुमिता ने पानी पीया और चली गई।
 C. जब सुमिता ने पानी पीया, तब वह चली गई।
 D. सुमिता पानी पीकर चली गई।

Question ID : 1034357270

Q.11 दिए गए शब्द का प्रत्यय ज्ञात कीजिए।
डिबिया

- Ans A. अया
 B. डि
 C. बि
 D. इया

Question ID : 1034357261

Q.12 दिए गए वाक्य में उपयुक्त विराम चिह्न का चयन कीजिए।
मोहन पुस्तक पढ़ रहा है

- Ans A. ?
 B. !
 C. " "
 D. |

Question ID : 1034357273

Q.13 निम्नलिखित वाक्यांश के लिए उचित शब्द का चयन कीजिए।
मन को मोह लेने वाला

- Ans A. मनोनीत
 B. मनमोहक
 C. मनसा
 D. मनमौजि

Question ID : 1034357266

Q.14 निम्नलिखित वाक्यों में से मिश्र वाक्य ज्ञात कीजिए।

- Ans A. रूबी घर जाकर भी काम में नहीं लगी।
 B. रूबी घर गई और काम में नहीं लगी।
 C. रूबी घर गई फिर भी काम में नहीं लगी।
 D. यद्यपि रूबी घर गई तथापि काम में नहीं लगी।

Question ID : 1034357269

Q.15 दिए गए शब्द की भाववाचक संज्ञा ज्ञात कीजिए।
सर्व

- Ans A. सर्वे
 B. सर्वत्र
 C. सर्वो
 D. सर्वस्व

Question ID : 1034357262

Comprehension:

एक गद्यांश दिया गया है। गद्यांश के आधार पर पाँच प्रश्न दिए गए हैं। गद्यांश को ध्यानपूर्वक पढ़ें तथा प्रत्येक प्रश्न के चार विकल्पों में से सही विकल्प चुनें।

किसी भी राष्ट्र की राष्ट्रभाषा वह होती है, जिसे उसमें रहने वाले अधिकांश नागरिक बोलते, समझते और व्यवहार में लाते हैं। इसके साथ-साथ उस देश की अपनी राष्ट्रभाषा का होना भी अत्यंत आवश्यक होता है। भारत में हिंदी ही एकमात्र ऐसी भाषा है जिसे लेह-लद्दाख से लक्षदीप और अरुणाचल प्रदेश से जैसलमेर तक सभी लोग बोलते हैं। इसलिए हिंदी भारत की राष्ट्रभाषा है।

हिंदी को राष्ट्रभाषा का गौरव दिलाने में स्वतंत्रता सेनानियों ने अहम् भूमिका निभाई है। वस्तुतः हिंदी द्वारा ही स्वतंत्रता का संघर्ष लड़ा गया। इसके माध्यम से ही सभी नेता और क्रांतिकारी विचारों का आदान-प्रदान करते थे। हिंदी के लिए गौरव का विषय यह रहा कि इसे राष्ट्रभाषा का स्थान अहिंदीभाषियों ने दिलाया। महात्मा गाँधी, सुभाषचंद्र बोस, लोकमान्य तिलक आदि अहिंदीभाषी थे। उन्होंने स्वतंत्रता आंदोलन में हिंदी भाषा का ही प्रयोग किया। सामाजिक कुरीतियों से छुटकारा दिलाने के लिए जिन महापुरुषों ने महत्वपूर्ण भूमिका निभाई उनमें स्वामी विवेकानंद और स्वामी दयानंद प्रमुख थे। दोनों ने सामाजिक कुरीतियों को दूर करके जिस भाषा द्वारा भारत को नया आध्यात्मिक चिंतन दिया वह हिंदी ही थी। महात्मा गाँधी ने तो यहाँ तक कहा था- 'अंग्रेज़ी कभी राष्ट्रभाषा नहीं बन सकती।

जो स्थान हिंदी को प्राप्त है, वह किसी दूसरी भाषा को नहीं मिल सकता।' पंडित जवाहरलाल नेहरू ने 16 मई सन् 1931 को सेठ गोविंददास को लिखा था- हिंदी ने अब पूर्णतः राष्ट्रभाषा की भूमिका ले ली है। नेता जी सुभाषचंद्र बोस ने 20 सितंबर 1928 को कहा था, 'यदि हमने तन, मन और धन से प्रयत्न किया तो वह दिन दूर नहीं जब भारत स्वाधीन होगा और उसकी राष्ट्रभाषा हिंदी होगी।'

SubQuestion No : 16

Q.16 उपर्युक्त गद्यांश का शीर्षक होगा-

- Ans A. राष्ट्रभाषा हिन्दी
 B. हिन्दी
 C. लोगों की भाषा
 D. भारतमाता

Question ID : 1034357277

Comprehension:

एक गद्यांश दिया गया है। गद्यांश के आधार पर पाँच प्रश्न दिए गए हैं। गद्यांश को ध्यानपूर्वक पढ़ें तथा प्रत्येक प्रश्न के चार विकल्पों में से सही विकल्प चुने।

किसी भी राष्ट्र की राष्ट्रभाषा वह होती है, जिसे उसमें रहने वाले अधिकांश नागरिक बोलते, समझते और व्यवहार में लाते हैं। इसके साथ-साथ उस देश की अपनी राष्ट्रभाषा का होना भी अत्यंत आवश्यक होता है। भारत में हिंदी ही एकमात्र ऐसी भाषा है जिसे लेह-लद्दाख से लक्षदीप और अरुणाचल प्रदेश से जैसलमेर तक सभी लोग बोलते हैं। इसलिए हिंदी भारत की राष्ट्रभाषा है।

हिंदी को राष्ट्रभाषा का गौरव दिलाने में स्वतंत्रता सेनानियों ने अहम् भूमिका निभाई है। वस्तुतः हिंदी द्वारा ही स्वतंत्रता का संघर्ष लड़ा गया। इसके माध्यम से ही सभी नेता और क्रांतिकारी विचारों का आदान-प्रदान करते थे। हिंदी के लिए गौरव का विषय यह रहा कि इसे राष्ट्रभाषा का स्थान अहिंदीभाषियों ने दिलाया। महात्मा गाँधी, सुभाषचंद्र बोस, लोकमान्य तिलक आदि अहिंदीभाषी थे। उन्होंने स्वतंत्रता आंदोलन में हिंदी भाषा का ही प्रयोग किया। सामाजिक कुरीतियों से छुटकारा दिलाने के लिए जिन महापुरुषों ने महत्वपूर्ण भूमिका निभाई उनमें स्वामी विवेकानंद और स्वामी दयानंद प्रमुख थे। दोनों ने सामाजिक कुरीतियों को दूर करके जिस भाषा द्वारा भारत को नया आध्यात्मिक चिंतन दिया वह हिंदी ही थी। महात्मा गाँधी ने तो यहाँ तक कहा था- 'अंग्रेज़ी कभी राष्ट्रभाषा नहीं बन सकती।

जो स्थान हिंदी को प्राप्त है, वह किसी दूसरी भाषा को नहीं मिल सकता।' पंडित जवाहरलाल नेहरू ने 16 मई सन् 1931 को सेठ गोविंददास को लिखा था- हिंदी ने अब पूर्णतः राष्ट्रभाषा की भूमिका ले ली है। नेता जी सुभाषचंद्र बोस ने 20 सितंबर 1928 को कहा था, 'यदि हमने तन, मन और धन से प्रयत्न किया तो वह दिन दूर नहीं जब भारत स्वाधीन होगा और उसकी राष्ट्रभाषा हिंदी होगी।'

SubQuestion No : 17

Q.17 स्वतंत्रता आंदोलन में किस भाषा का प्रयोग किया।

- Ans A. उर्दू
 B. हिन्दी
 C. अंग्रेज़ी
 D. संस्कृत

Question ID : 1034357280

Comprehension:

एक गद्यांश दिया गया है। गद्यांश के आधार पर पाँच प्रश्न दिए गए हैं। गद्यांश को ध्यानपूर्वक पढ़ें तथा प्रत्येक प्रश्न के चार विकल्पों में से सही विकल्प चुने।

किसी भी राष्ट्र की राष्ट्रभाषा वह होती है, जिसे उसमें रहने वाले अधिकांश नागरिक बोलते, समझते और व्यवहार में लाते हैं। इसके साथ-साथ उस देश की अपनी राष्ट्रभाषा का होना भी अत्यंत आवश्यक होता है। भारत में हिंदी ही एकमात्र ऐसी भाषा है जिसे लेह-लद्दाख से लक्षदीप और अरुणाचल प्रदेश से जैसलमेर तक सभी लोग बोलते हैं। इसलिए हिंदी भारत की राष्ट्रभाषा है।

हिंदी को राष्ट्रभाषा का गौरव दिलाने में स्वतंत्रता सेनानियों ने अहम् भूमिका निभाई है। वस्तुतः हिंदी द्वारा ही स्वतंत्रता का संघर्ष लड़ा गया। इसके माध्यम से ही सभी नेता और क्रांतिकारी विचारों का आदान-प्रदान करते थे। हिंदी के लिए गौरव का विषय यह रहा कि इसे राष्ट्रभाषा का स्थान अहिंदीभाषियों ने दिलाया। महात्मा गाँधी, सुभाषचंद्र बोस, लोकमान्य तिलक आदि अहिंदीभाषी थे। उन्होंने स्वतंत्रता आंदोलन में हिंदी भाषा का ही प्रयोग किया। सामाजिक कुरीतियों से छुटकारा दिलाने के लिए जिन महापुरुषों ने महत्वपूर्ण भूमिका निभाई उनमें स्वामी विवेकानंद और स्वामी दयानंद प्रमुख थे। दोनों ने सामाजिक कुरीतियों को दूर करके जिस भाषा द्वारा भारत को नया आध्यात्मिक चिंतन दिया वह हिंदी ही थी। महात्मा गाँधी ने तो यहाँ तक कहा था- 'अंग्रेज़ी कभी राष्ट्रभाषा नहीं बन सकती।

जो स्थान हिंदी को प्राप्त है, वह किसी दूसरी भाषा को नहीं मिल सकता।' पंडित जवाहरलाल नेहरू ने 16 मई सन् 1931 को सेठ गोविंददास को लिखा था- हिंदी ने अब पूर्णतः राष्ट्रभाषा की भूमिका ले ली है। नेता जी सुभाषचंद्र बोस ने 20 सितंबर 1928 को कहा था, 'यदि हमने तन, मन और धन से प्रयत्न किया तो वह दिन दूर नहीं जब भारत स्वाधीन होगा और उसकी राष्ट्रभाषा हिंदी होगी।'

SubQuestion No : 18

Q.18 जवाहरलाल नेहरू ने कब लिखा कि "हिंदी ने अब पूर्णतः राष्ट्र भाषा की भूमिका ले ली है"।

- Ans A. 16 मई सन् 1932
 B. 16 जून सन् 1931
 C. 20 सितंबर 1928
 D. 16 मई सन् 1931

Question ID : 1034357279

Comprehension:

एक गद्यांश दिया गया है। गद्यांश के आधार पर पाँच प्रश्न दिए गए हैं। गद्यांश को ध्यानपूर्वक पढ़ें तथा प्रत्येक प्रश्न के चार विकल्पों में से सही विकल्प चुनें।

किसी भी राष्ट्र की राष्ट्रभाषा वह होती है, जिसे उसमें रहने वाले अधिकांश नागरिक बोलते, समझते और व्यवहार में लाते हैं। इसके साथ-साथ उस देश की अपनी राष्ट्रभाषा का होना भी अत्यंत आवश्यक होता है। भारत में हिंदी ही एकमात्र ऐसी भाषा है जिसे लेह-लद्दाख से लक्षदीप और अरुणाचल प्रदेश से जैसलमेर तक सभी लोग बोलते हैं। इसलिए हिंदी भारत की राष्ट्रभाषा है।

हिंदी को राष्ट्रभाषा का गौरव दिलाने में स्वतंत्रता सेनानियों ने अहम् भूमिका निभाई है। वस्तुतः हिंदी द्वारा ही स्वतंत्रता का संघर्ष लड़ा गया। इसके माध्यम से ही सभी नेता और क्रांतिकारी विचारों का आदान-प्रदान करते थे। हिंदी के लिए गौरव का विषय यह रहा कि इसे राष्ट्रभाषा का स्थान अहिंदीभाषियों ने दिलाया। महात्मा गाँधी, सुभाषचंद्र बोस, लोकमान्य तिलक आदि अहिंदीभाषी थे। उन्होंने स्वतंत्रता आंदोलन में हिंदी भाषा का ही प्रयोग किया। सामाजिक कुरीतियों से छुटकारा दिलाने के लिए जिन महापुरुषों ने महत्वपूर्ण भूमिका निभाई उनमें स्वामी विवेकानंद और स्वामी दयानंद प्रमुख थे। दोनों ने सामाजिक कुरीतियों को दूर करके जिस भाषा द्वारा भारत को नया आध्यात्मिक चिंतन दिया वह हिंदी ही थी। महात्मा गाँधी ने तो यहाँ तक कहा था- 'अंग्रेज़ी कभी राष्ट्रभाषा नहीं बन सकती।

जो स्थान हिंदी को प्राप्त है, वह किसी दूसरी भाषा को नहीं मिल सकता।' पंडित जवाहरलाल नेहरू ने 16 मई सन् 1931 को सेठ गोविंददास को लिखा था- हिंदी ने अब पूर्णतः राष्ट्रभाषा की भूमिका ले ली है। नेता जी सुभाषचंद्र बोस ने 20 सितंबर 1928 को कहा था, 'यदि हमने तन, मन और धन से प्रयत्न किया तो वह दिन दूर नहीं जब भारत स्वाधीन होगा और उसकी राष्ट्रभाषा हिंदी होगी।'

SubQuestion No : 19

Q.19 किसने कहा "यदि हमने तन, मन और धन से प्रयत्न किया तो वह दिन दूर नहीं जब भारत स्वाधीन होगा और उसकी राष्ट्रभाषा हिंदी होगी" ?

- Ans A. स्वामी विवेकानंद
 B. सुभाषचंद्र बोस
 C. महात्मा गाँधी
 D. जवाहरलाल नेहरू

Question ID : 1034357281

Comprehension:

एक गद्यांश दिया गया है। गद्यांश के आधार पर पाँच प्रश्न दिए गए हैं। गद्यांश को ध्यानपूर्वक पढ़ें तथा प्रत्येक प्रश्न के चार विकल्पों में से सही विकल्प चुनें।

किसी भी राष्ट्र की राष्ट्रभाषा वह होती है, जिसे उसमें रहने वाले अधिकांश नागरिक बोलते, समझते और व्यवहार में लाते हैं। इसके साथ-साथ उस देश की अपनी राष्ट्रभाषा का होना भी अत्यंत आवश्यक होता है। भारत में हिंदी ही एकमात्र ऐसी भाषा है जिसे लेह-लद्दाख से लक्षदीप और अरुणाचल प्रदेश से जैसलमेर तक सभी लोग बोलते हैं। इसलिए हिंदी भारत की राष्ट्रभाषा है।

हिंदी को राष्ट्रभाषा का गौरव दिलाने में स्वतंत्रता सेनानियों ने अहम् भूमिका निभाई है। वस्तुतः हिंदी द्वारा ही स्वतंत्रता का संघर्ष लड़ा गया। इसके माध्यम से ही सभी नेता और क्रांतिकारी विचारों का आदान-प्रदान करते थे। हिंदी के लिए गौरव का विषय यह रहा कि इसे राष्ट्रभाषा का स्थान अहिंदीभाषियों ने दिलाया। महात्मा गाँधी, सुभाषचंद्र बोस, लोकमान्य तिलक आदि अहिंदीभाषी थे। उन्होंने स्वतंत्रता आंदोलन में हिंदी भाषा का ही प्रयोग किया। सामाजिक कुरीतियों से छुटकारा दिलाने के लिए जिन महापुरुषों ने महत्वपूर्ण भूमिका निभाई उनमें स्वामी विवेकानंद और स्वामी दयानंद प्रमुख थे। दोनों ने सामाजिक कुरीतियों को दूर करके जिस भाषा द्वारा भारत को नया आध्यात्मिक चिंतन दिया वह हिंदी ही थी। महात्मा गाँधी ने तो यहाँ तक कहा था- 'अंग्रेज़ी कभी राष्ट्रभाषा नहीं बन सकती।

जो स्थान हिंदी को प्राप्त है, वह किसी दूसरी भाषा को नहीं मिल सकता।' पंडित जवाहरलाल नेहरू ने 16 मई सन् 1931 को सेठ गोविंददास को लिखा था- हिंदी ने अब पूर्णतः राष्ट्रभाषा की भूमिका ले ली है। नेता जी सुभाषचंद्र बोस ने 20 सितंबर 1928 को कहा था, 'यदि हमने तन, मन और धन से प्रयत्न किया तो वह दिन दूर नहीं जब भारत स्वाधीन होगा और उसकी राष्ट्रभाषा हिंदी होगी।'

SubQuestion No : 20

Q.20 "अंग्रेज़ी कभी राष्ट्रभाषा नहीं बन सकती" किसने कहा?

- Ans A. जवाहरलाल नेहरू
 B. महात्मा गाँधी
 C. सुभाषचंद्र बोस
 D. स्वामी विवेकानंद

Question ID : 1034357278

Q.1 What is the preoperational stage in the context of Piagetian approach?
I. The second major stage of cognitive development.
II. In this stage children become more sophisticated in their use of symbolic thought but are not yet able to use logic.

- Ans A. Neither I nor II
 B. Both I and II
 C. Only I
 D. Only II

Question ID : 1034357289

Q.2 Which of the following statement describes the vision and hearing problems in children?
I. Almost 13 percent of children under 18 are estimated to be blind or to have impaired vision.
II. By the age of 3, children can focus better.

- Ans A. Only II
 B. Only I
 C. Neither I nor II
 D. Both I and II

Question ID : 1034357288

Q.3 In the context of motor skill, what is handedness?

- Ans A. Used for broken car handle
 B. Using to hold bus handle
 C. Using for the kindness to help someone
 D. Preference for using a particular hand

Question ID : 1034357283

Q.4 Which of the following pair is correctly matched?
I. Stress – Response to physical or psychological demands.
II. Stressors-Stress– Producing experiences.

- Ans A. Both I and II
 B. Neither I nor II
 C. Only II
 D. Only I

Question ID : 1034357298

Q.5 In the context of children's Theory of Mind, which of the following statement is correct?
I. It is the awareness and understanding of mental processes.
II. Brazelton was the first scholar to investigate this theory.

- Ans A. Only II
 B. Neither I nor II
 C. Only I
 D. Both I and II

Question ID : 1034357292

Q.6 _____ is a chronic respiratory disease characterized by sudden attacks of coughing, wheezing and difficulty in breathing.

- Ans
- A. Black Cough
 - B. COPD
 - C. GERD
 - D. Asthma

Question ID : 1034357284

Q.7 In the context of cognitive advances, which of the following statement describe categorization?

- I. It helps children think logically.
- II. It includes such sophisticated abilities as seriation, transitive inference and class inclusion.
- III. Transitive inference is the ability to understand the relationship between a whole class and its parts.

- Ans
- A. I and III
 - B. I, II and III
 - C. II and III
 - D. I and II

Question ID : 1034357293

Q.8 What is the Wechsler Intelligence scale of children?

- I. Individual intelligence test for school children.
- II. It yields verbal and performance scores as well as combined score.

- Ans
- A. Only II
 - B. Neither I nor II
 - C. Only I
 - D. Both I and II

Question ID : 1034357291

Q.9 What is social phobia?

- Ans
- A. Extreme fear or avoidance of social situations
 - B. Extreme fear of height
 - C. Extreme fear of thunder and lightning
 - D. Extreme fear of flying

Question ID : 1034357296

Q.10 Which of the following statement is correct in the context of Minor illness?

- I. Minor illness typically last a few days and are seldom serious enough to need a doctor attention.
- II. Cough, sniffles and runny noses are a part of early childhood.

- Ans
- A. Both I and II
 - B. Only II
 - C. Neither I nor II
 - D. Only I

Question ID : 1034357282

Q.11 In the context of Psychosocial development, Marcia found which of the following identity status?

- I. Foreclosure
- II. Moratorium

- Ans
- A. Only II
 - B. Only I
 - C. Both I and II
 - D. Neither I nor II

Question ID : 1034357295

Q.12 Which of the following protective factors can help children and adolescents overcome stress and contribute to resilience?

- I. Good family relationship
- II. Cognitive functioning

- Ans
- A. Neither I nor II
 - B. Only II
 - C. Both I and II
 - D. Only I

Question ID : 1034357300

Q.13 What is the neonatal jaundice?

- I. Condition in many newborn babies caused by immaturity of liver and evidenced by yellowish appearance.
- II. It can cause brain damage if not treated promptly.

- Ans
- A. Neither I nor II
 - B. Only I
 - C. Both I and II
 - D. Only II

Question ID : 1034357285

Q.14 In the context of memory, what is central executive?

- I. In Baddeley's model, element of working memory that controls the processing of information.
- II. Strategies using working memory through conscious repetition.

- Ans
- A. Only II
 - B. Both I and II
 - C. Only I
 - D. Neither I nor II

Question ID : 1034357290

Q.15 In the context of Emotional disorders, what is the childhood depression?
I. Mood disorders characterized by such symptoms as a prolonged sense of friendlessness and fatigue.
II. Anxiety aroused by repetitive, intrusive thoughts, images or ritual behaviors.

- Ans
- A. Only II
 - B. Both I and II
 - C. Neither I nor II
 - D. Only I

Question ID : 1034357297

Q.16 According to Marcia which of the following identity status is correctly matched?
I. Identity achievement – Characterized by absence of commitment and lack of serious consideration of alternatives.
II. Moratorium – A person is currently considering alternatives and seems headed for commitment.
III. Foreclosure – A person who has not spent time considering alternatives is committed to other people's plan for his or her life.

- Ans
- A. II and III
 - B. I and III
 - C. I and II
 - D. I, II and III

Question ID : 1034357301

Q.17 Which of the following principles of development is correct?
I. Cephalocaudal principle – Growth occurs from the down top.
II. Proximodistal principle – Growth and motor development proceed from the center of the body outward.

- Ans
- A. Both I and II
 - B. Only II
 - C. Only I
 - D. Neither I nor II

Question ID : 1034357286

Q.18 Which of the following is NOT correct?
I. Art Therapy is the therapeutic approach that allows a child to express troubled feelings without words.
II. Drug therapy is administration of drugs to treat emotional disorders.

- Ans
- A. Only II
 - B. Neither I nor II
 - C. Both I and II
 - D. Only I

Question ID : 1034357299

Q.19 According to Erikson _____ is a coherent conception of the self, made up of goals, values and beliefs to which a person is solidly committed.

- Ans A. Alteration
 B. Identity
 C. Variation
 D. Modification

Question ID : 1034357294

Q.20 In the context of the Brain and Reflex Behavior, which of the following statement is correct?

- I. Beginning about two weeks after conception, the brain gradually develops from long hollow tube into a spherical mass of cells.
II. The cerebellum grows fastest during the first year of life.

- Ans A. Both I and II
 B. Only I
 C. Neither I nor II
 D. Only II

Question ID : 1034357287

Section : Discipline2

Q.1 Which of the following roles of a teacher similar to the roles and responsibilities of a manager in an organization?

- I. Giving priority to maintain discipline in the classroom.
II. Providing feedback to students about their performance.

- Ans A. Only II
 B. Only I
 C. Both I and II
 D. Neither I nor II

Question ID : 1034357317

Q.2 How many chapters are there in The Right of Children to Free and Compulsory Education Act, 2009?

- Ans A. Eight
 B. Seven
 C. Six
 D. Five

Question ID : 1034357303

Q.3 Which of the following is a teacher generated cause of indiscipline?

- I. Indifference to problems of students.
- II. Poor teaching.
- III. Discriminatory treatments.

- Ans
- A. I and II
 - B. II and III
 - C. Only I
 - D. I, II and III

Question ID : 1034357318

Q.4 The given sitting arrangement is effective for which type of activity in a school?

Students sitting in a semicircle facing other group of students sitting in a semicircle and teacher takes a middle position.

- Ans
- A. Demonstration of an experiment
 - B. Group competition
 - C. Solving problems on the board
 - D. Reciting stories and poems

Question ID : 1034357315

Q.5 Whenever a teacher gives a threat of punishment of failure, he/she is using _____

- I. Positive reinforcement.
- II. Negative reinforcement.

- Ans
- A. Only I
 - B. Both I and II
 - C. Only II
 - D. Neither I nor II

Question ID : 1034357313

Q.6 Which of the following statements is correct regarding the usefulness of competency based approach?

- Ans
- A. Teaching – learning process is joyful and interesting
 - B. Proficiency of a teacher is not a matter of concern
 - C. The students have to learn the same topic again and again
 - D. The learning climate in all schools is equally conducive for optimizing learning

Question ID : 1034357316

Q.7 Which of the following statements is correct regarding the cooperative learning model?

- I. Students work in groups to master academic materials.
- II. Reward systems are individually oriented rather than group-oriented.

- Ans
- A. Neither I nor II
 - B. Only II
 - C. Both I and II
 - D. Only I

Question ID : 1034357319

Q.8 The following statements are referring to which learning style?
'Learner relies on intuition rather than logic. They set targets and actively work in the field trying different ways to achieve an objective?'

- Ans A. Accommodating style
 B. Assimilating style
 C. Diverging style
 D. Converging style

Question ID : 1034357314

Q.9 Which approach of learning is called as self-Regulatory Learning (SRL)?

- Ans A. Social Learning
 B. Community Learning
 C. Group Learning
 D. Individual Learning

Question ID : 1034357321

Q.10 The book 'Democracy and Education' is written by _____.

- Ans A. Rabindranath Tagore
 B. John Dewey
 C. Maria Montessori
 D. Mahatma Gandhi

Question ID : 1034357312

Q.11 In the Panchayati Raj System, the Ward members and the Panchayat president are elected by _____.

- Ans A. the secretary of Gram Sabha
 B. the district officer
 C. the Panchayat President
 D. the members of Gram Sabha

Question ID : 1034357302

Q.12 When was the Scheduled Castes and Scheduled Tribes (Prevention of Atrocities) act enacted?

- Ans A. 1989
 B. 1990
 C. 1988
 D. 1980

Question ID : 1034357304

Q.13 Which of the following statements is correct about provisions of Equality in the Constitution?

- I. Every person is equal before the eyes of the law.
- II. Every person has access to public places.

- Ans
- A. Both I and II
 - B. Only II
 - C. Only I
 - D. Neither I nor II

Question ID : 1034357306

Q.14 Salend defines special education as characterized by _____.

- I. Specialized instruction
- II. Goal-directed instruction

- Ans
- A. Both I and II
 - B. Neither I nor II
 - C. Only II
 - D. Only I

Question ID : 1034357311

Q.15 Which of the following statements is correct about the Challenge of Democracy?

- I. Countries can be described completely democratic.
- II. There are always communities and individuals trying to expand the idea of democracy.

- Ans
- A. Only II
 - B. Only I
 - C. Both I and II
 - D. Neither I nor II

Question ID : 1034357307

Q.16 In old literature, a woman is never fit for independence is written in which religious text?

- Ans
- A. Manusmriti
 - B. Rigveda
 - C. Ramayana
 - D. Mahabharata

Question ID : 1034357309

Q.17 _____ is defined as the probable number among every 1000 babies who would fail to survive within the first year of being born.

- Ans
- A. Maternal mortality rate
 - B. Infant mortality rate
 - C. Proportionate mortality rate
 - D. Cause-specific death rate

Question ID : 1034357308

Q.18 The given lines can be read in the book 'The Unschooled Mind.' Which of the following psychologist is the author of this book?
'We must place ourselves inside the heads of our students and try to understand as far as possible the sources and strengths of their conceptions'

- Ans A. Howard Gardner
 B. John Ruskin
 C. Thomas Henry Huxley
 D. Martin Buber

Question ID : 1034357320

Q.19 Which of the following statements is correct about the causes of the Revolt of 1857?
I. Religious interference.
II. Racial Arrogance.
III. Equal pay.

- Ans A. I and III
 B. I and II
 C. II and III
 D. Only I

Question ID : 1034357305

Q.20 In which country, the term inclusive special education has been used to describe the special education system?

- Ans A. Finland
 B. Afghanistan
 C. China
 D. Nepal

Question ID : 1034357310

Section : Discipline3

Q.1 In the context of mental abilities, which of the following types of intelligence is correctly matched?
I. Linguistic – make it possible for individual to visualize, transform and the use spatial information.
II. Logic mathematics – allows individuals to use abstract mathematical relations.
III. Inter-personal – enables individuals the capacity for reflective understanding of others and oneself.

- Ans A. I, II and III
 B. I and III
 C. I and II
 D. II and III

Question ID : 1034357327

Q.2 In a teacher centered approach what is the main characteristics?

- I. Source of knowledge is teacher
- II. Active teachers gives information to passive students

- Ans
- A. Only II
 - B. Both I and II
 - C. Only I
 - D. Neither I nor II

Question ID : 1034357322

Q.3 Which of the following are the broader and narrower aims of mathematics education?

- I. Optimization
- II. Use of heuristics
- III. Estimation and approximation
- IV. Representation

- Ans
- A. II and III
 - B. I, II and IV
 - C. I, II, III and IV
 - D. II, III and IV

Question ID : 1034357338

Q.4 In an environmental studies class, on which of the following themes small group discussions can be arranged?

- I. Is circus a cruelty to animals?
- II. Should fast food be sold in school canteen?
- III. Roads or Parks : what does our city need the most?

- Ans
- A. Only II
 - B. I and II
 - C. I, II and III
 - D. II and III

Question ID : 1034357341

Q.5 Which of the following is the characteristic of subject - centered approach?

- I. The learning needs of these students are supposed to be fulfilled through the text book.
- II. Teacher is mostly concerned with completion of the course contents.

- Ans
- A. Neither I nor II
 - B. Both I and II
 - C. Only I
 - D. Only II

Question ID : 1034357326

Q.6 If children are given an opportunity to interact by the teacher, which of the following can result?

- Ans A. They will become used to writing more
 B. They will be able to express their feeling and thoughts
 C. They will become lazy
 D. They will expertise in a game

Question ID : 1034357334

Q.7 Which of the following subject structure is correct in Hindi?

- Ans A. Subject + object + verb
 B. Object + subject
 C. Subject + verb
 D. Verb + object

Question ID : 1034357332

Q.8 What is the place value of 3 and face value of 2 in 320?

- Ans A. 300, 20
 B. 200, 30
 C. 200, 3
 D. 300, 2

Question ID : 1034357335

Q.9 Which of the following is a variety of the English language?

- I. British English
II. Australian English

- Ans A. Both I and II
 B. Only I
 C. Only II
 D. Neither I nor II

Question ID : 1034357331

Q.10 By which of the following a listener can understand a dialouge?

- I. Based on words of dialouge
II. Based on their previous knowledge

- Ans A. Only I
 B. Only II
 C. Both I and II
 D. Neither I nor II

Question ID : 1034357333

Q.11 A classroom period may be needed to consolidate the learnings of the visit to the field trip. Such a session may include which of the following?
I. Writing or drawing about the trip.
II. Question-answer sessions.
III. Discussions.

- Ans A. I and III
 B. I, II and III
 C. Only III
 D. Only II

Question ID : 1034357339

Q.12 _____ is the ability to arrange similar objects in a definite order.

- Ans A. Expulsion
 B. Seriation
 C. Elevation
 D. Emulation

Question ID : 1034357324

Q.13 In the context of listen and draw, drawing game, it helps.
I. Every one to work together.
II. The children have to listen.

- Ans A. Only II
 B. Only I
 C. Neither I nor II
 D. Both I and II

Question ID : 1034357329

Q.14 What is teacher – centered approach?
I. Everything in the class depends on the teacher.
II. The student have little say in any matter.

- Ans A. Neither I nor II
 B. Only II
 C. Both I and II
 D. Only I

Question ID : 1034357325

Q.15 Which of the following pair is correctly matched with their components of the computer?

- I. Input devices – Keyboard, Mouse, ROM
II. Storage Devices – ROM , CD-R, CD-RW

- Ans A. Only II
 B. Neither I nor II
 C. Both I and II
 D. Only I

Question ID : 1034357323

Q.16 Which of the following sound is involved in the process of cooing or gooing?

- I. uuuu
- II. iiiii

- Ans A. Both I and II
- B. Neither I nor II
- C. Only II
- D. Only I

Question ID : 1034357328

Q.17 'Find $a^2 \times a^2 = ?$; Explanation: From the law of indices, it is known that $a^m \times a^n = a^{m+n}$. Here $a^2 \times a^{10} = a^{2+10} = a^{12}$.' This scenario represents which method for teaching and learning mathematics?

- I. Inductive
- II. Deductive

- Ans A. Neither I nor II
- B. Both I and II
- C. Only II
- D. Only I

Question ID : 1034357336

Q.18 What different methods can teachers use to help children remember new things all the time?

- I. Guessing
- II. Classifying
- III. Retribution

- Ans A. II and III
- B. I, II and III
- C. I and II
- D. I and III

Question ID : 1034357330

Q.19 Environmental studies at the primary stage should have some salient features. Which of the following is not that feature?

- Ans A. It should not enhance the natural curiosity
- B. The age, mental level, aptitude, interest and abilities of the child should be the main criteria for selecting the activities
- C. It should develop the desired skills in children
- D. It should enable the child to adopt environment-friendly lifestyle

Question ID : 1034357340

Q.20 Which of the following processes are involved in problem solving?

- I. Inferring
- II. Comparing
- III. Observing

Ans A. I, II and III

B. Only II

C. I and II

D. II and III

Question ID : 1034357337

Section : Discipline4

Q.1 Why midday meals are better than 'day rations'?

- I. Midday meals prompt children to go to school on their own without much Cajoling or coaxing from their parents.
- II. Midday meals also make it easier to retain pupils at school after the lunch break.

Ans A. Only I

B. Both I and II

C. Only II

D. Neither I nor II

Question ID : 1034357359

Q.2 Which of the following pair is correctly matched in the context of evaluation?

- I. Continuous evaluation – The final grade at the end of the session
- II. Comprehensive evaluation – Regularity of assessment

Ans A. Both I and II

B. Only I

C. Only II

D. Neither I nor II

Question ID : 1034357347

Q.3 Name the Education Commission that recommended for providing training for democracy?

Ans A. Revised national policy (1992)

B. University education commission (1948-49)

C. National Policy on education (1986)

D. The Indian education commission (1964-66)

Question ID : 1034357344

Q.4 Which of the following statements is correct regarding the physiological changes that occur during adolescence?

- I. These changes are triggered by the hypothalamus and endocrine glands.
- II. The rise in hormonal levels is found associated with the problem of acne in adolescence.

- Ans
- A. Both I and II
 - B. Only II
 - C. Only I
 - D. Neither I nor II

Question ID : 1034357357

Q.5 Which of the following statement is correct?

- I. Games have to be selected depending upon available resources.
- II. The season must be kept in mind while selecting the games.

- Ans
- A. Only II
 - B. Both I and II
 - C. Neither I nor II
 - D. Only I

Question ID : 1034357349

Q.6 Sufi is a performing art of _____.

- Ans
- A. regional music
 - B. classical dance
 - C. classical music
 - D. puppetry

Question ID : 1034357346

Q.7 Which of the following pairs of 'Country-Right to vote age' is correct?

- I. India - 18 years
- II. Austria - 16 years

- Ans
- A. Only II
 - B. Both I and II
 - C. Neither I nor II
 - D. Only I

Question ID : 1034357356

Q.8 Which of the following statement is correct in the context of Rasa?

- I. Bharata muni outlined eight Rasas or states of emotion.
- II. The principal meaning of Karun Rasa is sadness.
- III. Shant Rasa was proposed by Laksmanagupta

- Ans
- A. II and III
 - B. I, II and III
 - C. I and III
 - D. I and II

Question ID : 1034357348

Q.13 Living soil invites endless queries among children in school gardens which of the following are those queries?

- I. How did those roots get down there?
- II. If the garden floods, then what will happen to the worms?

- Ans
- A. Only I
 - B. Both I and II
 - C. Neither I nor II
 - D. Only II

Question ID : 1034357351

Q.14 To avoid falls at school, which steps should be taken?

- I. Ramps for children with special needs
- II. Volunteers should be appointed during lunch break
- III. Stairs should have small steps

- Ans
- A. Only I
 - B. II and III
 - C. Only III
 - D. I, II and III

Question ID : 1034357360

Q.15 Puberty refers to physical changes that take place during _____.

- I. Early part of adolescence.
- II. Childhood.

- Ans
- A. Both I and II
 - B. Neither I nor II
 - C. Only I
 - D. Only II

Question ID : 1034357353

Q.16 In the context of subaltern perspective of social science, which of the following statement is correct?

- I. Subaltern school of thought don't glorify the British Empire and the their educational policies.
- II. Subaltern perspective is a response from below to the hegemonic power of the elite groups.

- Ans
- A. Only I
 - B. Both I and II
 - C. Only II
 - D. Neither I nor II

Question ID : 1034357345

Q.17 Each round of boxing is of _____ minutes (excluding interval time).

- Ans
- A. 4
 - B. 5
 - C. 3
 - D. 2

Question ID : 1034357350

Q.18 Which factors govern the intramurals?

- I. Geography
- II. Climate
- III. Time available

- Ans
- A. Only III
 - B. Only II
 - C. I, II and III
 - D. II and III

Question ID : 1034357361

Q.19 Which subject can bring a sense of familiarity among the students with the entire world?

- I. World History
- II. World geography

- Ans
- A. Only I
 - B. Neither I nor II
 - C. Both I and II
 - D. Only II

Question ID : 1034357343

Q.20 Which of the following statements is correct regarding the cognitive and intellectual development in adolescents?

- I. The gains in cognitive abilities are tremendous between the ages of 8 and 12.
- II. The information processing approach attempts to explain the cognitive strategy by which human brain processes information.

- Ans
- A. Both I and II
 - B. Only I
 - C. Neither I nor II
 - D. Only II

Question ID : 1034357358

Section : Discipline5

Q.1 Physical labour done in any direction towards the production for oneself or societal cause is considered as _____.

- Ans
- A. leisure
 - B. restrict
 - C. rest
 - D. work

Question ID : 1034357365

Q.2 Which commission realized the need for a big change in the academic form of education?

- Ans A. The Education Commission (1964-66)
 B. Secondary Education Commission (1952-53)
 C. University Education Commission (1948-49)
 D. National Knowledge Commission (2009)

Question ID : 1034357367

Q.3 Name the person who quoted "Leadership is ultimately about creating a way for people to contribute to making something extra ordinary happen".

- Ans A. Abraham Lincoln
 B. Nelson Mandela
 C. Ken Ogonnia
 D. Alan Keith

Question ID : 1034357375

Q.4 Maa -Beti Mela is a community initiative celebrated in which state?

- Ans A. Andhra Pradesh
 B. Madhya Pradesh
 C. Uttar Pradesh
 D. Kerala

Question ID : 1034357377

Q.5 Which of the following Activities are the example of Social Science concepts?

- I. Carpentry
II. Pottery
III. Transportation.

- Ans A. II and III
 B. I and III
 C. I, II and III
 D. I and II

Question ID : 1034357374

Q.6 What are the reasons for informing the students and parents about their progress?

- I. To tell about achievements needs and behaviour
II. To maximize fear
III. To discourage both student and parents
IV. To help in making their future plans

- Ans A. I, II, III and IV
 B. II and III
 C. I
 D. I and II

Question ID : 1034357369

Q.7 समुद्री ध्वनि या तरंगों की ध्वनि की नकल करने के बारे में कौन सा प्राणायाम है?

- Ans A. दिर्गया प्राणायाम
 B. शीतली प्राणायाम
 C. कपालभृति प्राणायाम
 D. उज्जयी प्राणायाम

Question ID : 1034357362

Q.8 Which of the following statement is correct in the context of teacher function?
I. The teacher effect the value consideration of the member in the schools system.
II. He/she inspires parents, students and colleagues..

- Ans A. Only I
 B. Only II
 C. Neither I nor II
 D. Both I and II

Question ID : 1034357381

Q.9 Which of the following statement is correct, in the context of mother's club?

- Ans A. Discussing on education related matters
 B. gathering place of old citizens
 C. A party club
 D. It is a health club for orphans

Question ID : 1034357368

Q.10 A standing start is taken in all the medium distance races except _____ meter race.

- Ans A. 3000
 B. 5000
 C. 1500
 D. 800

Question ID : 1034357364

Q.11 Which of the following factor of work education is correct?

- I. It establishes coordination in hand and brain
II. It is essential in learning processes

- Ans A. Only II
 B. Neither I nor II
 C. Both I and II
 D. Only I

Question ID : 1034357366

Q.12 Which of the following statement is correct in the context of fees?
I. In government aided school, grants-in-aid is given by the government or deficit base principle.
II. In private unaided schools, fees are always lower than the government aided schools.

- Ans A. Only I
 B. Only II
 C. Neither I nor II
 D. Both I and II

Question ID : 1034357380

Q.13 Which of the following is NOT the functions of School Management Committee?
I. Supervise the construction activities.
II. Making education policies of the nation.
III. Monitoring children's growth in different subjects.

- Ans A. Only II
 B. Only I
 C. I, II and III
 D. I and III

Question ID : 1034357373

Q.14 Name the person who presented comprehensive Indian descriptions and explanations of Leadership.

- I. Burns
II. Watson
III. Rost

- Ans A. I and II
 B. I, II and III
 C. I and III
 D. II and III

Question ID : 1034357376

Q.15 What are the advantages of Dhanurasana?

- I. It gives new energy to the throat
II. It cures tumor
III. It relieves gastric troubles

- Ans A. I, II and III
 B. Only II
 C. I and II
 D. Only I

Question ID : 1034357363

Q.16 In the context of knowledge, which of the following statement is correct?
I. Knowledge is comparable with intelligence, knowledge is wisdom and wisdom is marketable.
II. Wisdom is infinite, it includes knowledge and the way of action.

- Ans A. Both I and II
 B. Only II
 C. Neither I nor II
 D. Only I

Question ID : 1034357372

Q.17 Which of the following statement is correct in the context of education?
I. Education is a part of concurrent list.
II. Both central and state government make laws for the educational institutions.

- Ans A. Only I
 B. Both I and II
 C. Only II
 D. Neither I nor II

Question ID : 1034357378

Q.18 Which of the following is a 'Corpus fund' endowed by an individual or family for a good social cause?
I. Endowment
II. Salary

- Ans A. Neither I nor II
 B. Both I and II
 C. Only II
 D. Only I

Question ID : 1034357379

Q.19 _____ mould our thoughts and feelings from the tender age.
I. Opinion
II. Tradition

- Ans A. Neither I nor II
 B. Both I and II
 C. Only I
 D. Only II

Question ID : 1034357370

Q.20 In the context of fear, Which of the following statement is correct?

I. It cannot be eliminated through discipline, sublimation or through any other act of will.

II. It dulls the mind and heart so that we are not alert to the whole significance of life.

- Ans
- A. Only II
 - B. Neither I nor II
 - C. Both I and II
 - D. Only I

Question ID : 1034357371



Teachingninja.in