



# Teachingninja.in

**DSSSB PRT 24 March 2022 Shift 3 Paper**

- ★ Latest Govt Job updates
- ★ Private Job updates
- ★ Free Mock tests available

**Visit - [teachingninja.in](https://teachingninja.in)**

Test Date	24/03/2022
Test Time	4:30 PM - 6:30 PM
Subject	ASSISTANT TEACHER PRIMARY

Section : Mental Ability

Q.1 If 'A + B' means 'A is the brother of B', 'A @ B' means 'A is the father of B', 'A # B' means 'A is the sister of B', 'A \$ B' means 'A is the wife of B', 'A \* B' means 'A is the mother of B', then which of the following statement is correct for the given expression?

$P * Q + R \# S + T \$ U$

I. P is the mother-in-law of U.

II. U is the brother of R.

- Ans
- A. Both I and II
  - B. Only II
  - C. Neither I nor II
  - D. Only I

Question ID : 1034357389

Q.2 Arrange the given words in the sequence in which they occur in the dictionary.

1. Fakers
2. Faena
3. Fblers
4. Factums
5. Faecals

- Ans
- A. 34512
  - B. 34251
  - C. 31425
  - D. 34521

Question ID : 1034357382

Q.3 In the following question, select the odd word from the given alternatives.

- Ans
- A. Table Tennis
  - B. Cricket
  - C. Carrom
  - D. Chess

Question ID : 1034357384

Q.4 In the following question below are given some statements followed by some conclusions based on those statements. Taking the given statements to be true even if they seem to be at variance from commonly known facts. Read all the conclusions and then decide which of the given conclusion logically follows the given statements.

Statements:

I. All P are Q.

II. No Q is F.

Conclusions:

I. No P is F.

II. No F is Q.

Ans  A. Neither conclusion follows

B. Both conclusion I and II follows

C. Only conclusion I follows

D. Only conclusion II follows

Question ID : 1034357391

Q.5 Two boys A and B start walking in the opposite direction from a same point. A walks 25 metre towards the east. Then, he turns to the right and walks 20 metre. Then, he turns to the left and walks 15 metre. In the mean time, B walks 15 metre. Then, he turns to the right and walks 40 metre. Then, he turns to the left and walks 25 metre. How far and in which direction is B from A?

Ans  A. 100 metre, South-east

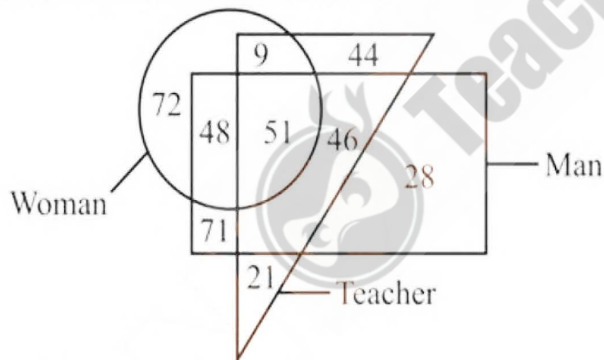
B. 100 metre, North-west

C. 140 metre, North-west

D. 140 metre, South-east

Question ID : 1034357398

Q.6 What is the total number of teachers?



Ans  A. 199

B. 171

C. 150

D. 141

Question ID : 1034357395

Q.7 In a certain code language, 'G' is written as '20', 'AT' is written as '33'. What is the code for 'WORD' in that code language?

- Ans
- A. 45
  - B. 55
  - C. 58
  - D. 48

Question ID : 1034357387

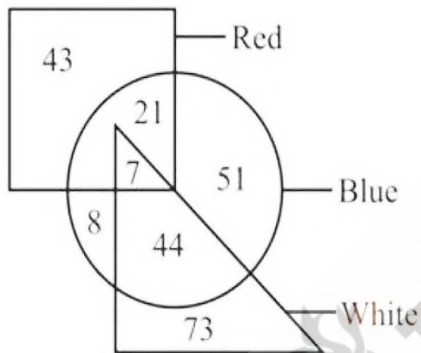
Q.8 In the following question, select the missing number from the given series.  
5.5, 11, 17.5, 25, 33.5, 43, ?

- Ans
- A. 52.5
  - B. 53.5
  - C. 54.5
  - D. 51.5

Question ID : 1034357393

Q.9 Based on the given venn diagram, which of the following statement(s) is/are correct?

- I. The number of blue which are only red is 21.
- II. The number of white which are red is 7.



- Ans
- A. Only I
  - B. Neither I nor II
  - C. Both I and II
  - D. Only II

Question ID : 1034357396

Q.10 In the following question below are given some statements followed by some conclusions based on those statements. Taking the given statements to be true even if they seem to be at variance from commonly known facts. Read all the conclusions and then decide which of the given conclusion logically follows the given statements.

Statements:

I. All N are S.

II. All S are P.

III. No P is T.

Conclusions:

I. No S is T.

II. No N is T.

III. No T is S.

- Ans  A. Both conclusion I and II follows  
 B. All conclusion follows  
 C. Both conclusion I and III follows  
 D. Both conclusion II and III follows

Question ID : 1034357392

Q.11 A team of five members is to be selected among eight members M1, M2, M3, M4, M5, M6, M7 and M8. M4 and M7 have to be selected together. M3 and M6 have to be selected together. Either M2 or M6 has to be selected with M1. Which of the following members can be selected?

- Ans  A. M2, M3, M5, M6, M8  
 B. M2, M3, M4, M6, M8  
 C. M3, M4, M5, M6, M8  
 D. M1, M2, M3, M5, M8

Question ID : 1034357388

Q.12 Which figure is similar to the given figures?



Ans

- A.
- B.
- C.
- D.

Question ID : 1034357399

Q.13 A series is given with one term missing. Select the correct alternative from the given ones that will complete the series.  
QLD, WGJ, CBP, IWV, ORB, ?

- Ans  A. VMH  
 B. UMH  
 C. UMJ  
 D. UNH

Question ID : 1034357383

Q.14 In the following question, select the related words from the given alternatives.  
Mass : Kilogram :: Force : ?

- Ans  A. Joule  
 B. Watt  
 C. Newton  
 D. Pascal

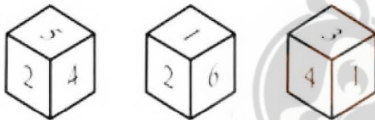
Question ID : 1034357385

Q.15 In the following question, select the related letter pair from the given alternatives.  
TVF : ZQL :: ?

- Ans  A. RGT : XAZ  
 B. LDM : RXS  
 C. PLW : VGC  
 D. QNS : WIZ

Question ID : 1034357386

Q.16 A dice has six numbers marked 1, 2, 3, 4, 5 and 6 on its faces. Three positions of a dice are shown below.



Which of the following statement is correct?

- I. 4 and 6 are on opposite faces.  
II. 1 and 5 are on opposite faces.

- Ans  A. Only II  
 B. Neither I nor II  
 C. Only I  
 D. Both I and II

Question ID : 1034357401

Q.17 Seven boxes A, B, C, D, E, F and G are kept one above the other (not necessarily in the same order). Two boxes are kept between A and D. Three boxes are kept between D and F. C is kept just above G. D is kept just below E. G is kept above A. B is kept below E. Which of the following statement is correct?

- I. B is kept at the bottom.
- II. C is kept at the top.

- Ans
- A. Neither I nor II
  - B. Only II
  - C. Only I
  - D. Both I and II

Question ID : 1034357390

Q.18 In the following question, select the number which can be placed at the sign of question mark (?) from the given alternatives.

18	12	9	18
24	19	13	30
28	21	14	?

- Ans
- A. 49
  - B. 48
  - C. 52
  - D. 42

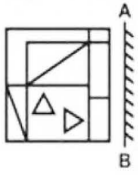
Question ID : 1034357394

Q.19 Ravi walks 18 km towards the north. He turns to the left and walks 25 km. He again turns to the left and walks 19 km. Finally, he turns to the right and walks 27 km. How many distance did ravi walk?

- Ans
- A. 89 km
  - B. 79 km
  - C. 91 km
  - D. 81 km

Question ID : 1034357397

Q.20 If a mirror is placed on the line AB, then which of the answer figures is the right image of the given figure?

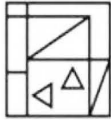


Ans

A.



B.



C.



D.



Question ID : 1034357400

Section : General Awareness

Q.1 Which of the following drainage pattern develops where hard and soft rocks exist parallel to each other?

Ans  A. Trellis drainage pattern

B. Rectangular drainage pattern

C. Dendritic drainage pattern

D. Radial drainage pattern

Question ID : 1034357410

Q.2 Which article of the Indian constitution is related to right to equality before law?

Ans  A. Article 14

B. Article 17

C. Article 25

D. Article 28

Question ID : 1034357418



Q.3 In June 2021, which organization has developed nano-fibre based Amphotericin B Oral Tablets?

- Ans  A. IIT Delhi  
 B. IIT Hyderabad  
 C. IIT Kanpur  
 D. IIT Guwahati

Question ID : 1034357417

Q.4 Which of the following is an example of direct tax?

- Ans  A. GST  
 B. Corporation tax  
 C. Customs duties  
 D. Excise tax

Question ID : 1034357404

Q.5 Which of the following statement is correct?  
I. Aihole was the capital of Chalukyas dynasty.  
II. Harshacharitra was written by Banabhatta.

- Ans  A. Both I and II  
 B. Only I  
 C. Only II  
 D. Neither I nor II

Question ID : 1034357414

Q.6 Headquarter of FIFA is situated in \_\_\_\_\_.

- Ans  A. Zurich  
 B. London  
 C. Cape Town  
 D. Dubai

Question ID : 1034357420

Q.7 The SI unit of acceleration is \_\_\_\_\_.

- Ans  A. ms  
 B.  $m/s^2$   
 C.  $ms^2$   
 D. m/s

Question ID : 1034357406

Q.8 Which of the following statement is correct?

- I. The government of India Act, 1935 is the biggest source for the constitution of India.  
II. The concept of Judicial Review in Indian constitution has been taken from the constitution of Canada.

- Ans  A. Only II  
 B. Both I and II  
 C. Only I  
 D. Neither I nor II

Question ID : 1034357419

Q.9 First cotton mill in India was set up in \_\_\_\_\_.

- Ans  A. Goa  
 B. Calcutta  
 C. Bombay  
 D. Mysore

Question ID : 1034357413

Q.10 In 1887, who was the president of Indian National Congress?

- Ans  A. Gopal Krishna Gokhale  
 B. Surendranath Banerjee  
 C. Badruddin Tyabji  
 D. Dadabhai Naoroji

Question ID : 1034357412

Q.11 Which of the following is a percussion instrument?

- Ans  A. Kamaicha  
 B. Flute  
 C. Table  
 D. Shehnai

Question ID : 1034357402

Q.12 Which of the following statement is correct?

- I. Qutub Minar in red and buff sandstone is the highest tower in India.  
II. The Brihadisvara temples are situated at Thanjavur.

- Ans  A. Both I and II  
 B. Neither I nor II  
 C. Only II  
 D. Only I

Question ID : 1034357403

Q.13 The first summer youth Olympic games was held in \_\_\_\_\_.

- Ans  A. Brazil  
 B. New Zealand  
 C. Singapore  
 D. Argentina

Question ID : 1034357421

Q.14 Which of the following statement is correct?

- I. Rutherford's alpha-particle scattering experiment led to the discovery of the atomic nucleus.  
II. Isotopes are atoms of the same element, which have different mass numbers.

- Ans  A. Both I and II  
 B. Only II  
 C. Only I  
 D. Neither I nor II

Question ID : 1034357408

Q.15 Who is the author of the book "The commonwealth of Cricket"?

- Ans  A. John Arlott  
 B. Gideon Haigh  
 C. Dr. Roopa Chari  
 D. Ramachandra Guha

Question ID : 1034357416

Q.16 Which of the following statement is correct?

- I. In 1949, the planning commission was set up with the prime ministers as its chair person.  
II. The GDP is the market value of all the final goods and services produced in the country during a year.

- Ans  A. Only I  
 B. Only II  
 C. Neither I nor II  
 D. Both I and II

Question ID : 1034357405

Q.17 Sea anemones are example of \_\_\_\_\_.

- Ans  A. Porifera  
 B. Coelenterata  
 C. Annelida  
 D. Platyhelminthes

Question ID : 1034357407

Q.18 In June 2021, which state of India has launched 'DBT Mobile Application' to transfer funds directly to beneficiaries?

- Ans  A. Uttar Pradesh  
 B. Kerala  
 C. Karnataka  
 D. Gujarat

Question ID : 1034357415

Q.19 Which of the following lakes is a salt water lake?

- Ans  A. Loktak  
 B. Wular  
 C. Dal  
 D. Sambhar

Question ID : 1034357409

Q.20 Which pair of peak – country is NOT correct?

- I. Mt. Everest – India  
II. Makalu – Nepal

- Ans  A. Neither I nor II  
 B. Only II  
 C. Both I and II  
 D. Only I

Question ID : 1034357411

Section : Arithmetic Ability

Q.1 The table given below shows the production of 6 companies in three years.

Company	Year		
	Y1	Y2	Y3
C1	20	40	80
C2	30	20	70
C3	50	72	48
C4	40	60	16
C5	60	50	24
C6	26	90	36

What is the ratio of the total production of company C1 to the total production of company C2 in all the 3 years?

- Ans  A. 12 : 7  
 B. 7 : 6  
 C. 7 : 3  
 D. 9 : 7

Question ID : 1034357439

Q.2 A person bought 40 pencils at the rate of Rs. 45 per pencil. He sells 20 pencils at a loss of 20 percent. If profit of 40 percent is earned on the all pencils together, then what will be the profit percentage on the remaining 20 pencils?

- Ans  A. 135  
 B. 100  
 C. 200  
 D. 120

Question ID : 1034357430

Q.3 A bike covers a distance of 420 metres in 84 seconds. What is its speed?

- Ans  A. 20 km/hr  
 B. 18 km/hr  
 C. 12 km/hr  
 D. 24 km/hr

Question ID : 1034357434

Q.4 In three positive numbers, the ratio of first and second is 2 : 3, ratio of second and third is 7 : 3. The product of first and third is 8064. What is the sum of the three numbers?

- Ans  A. 352  
 B. 308  
 C. 360  
 D. 400

Question ID : 1034357431

Q.5 If  $(\sqrt[4]{5})^{12} \times (\sqrt{2})^6 = ((2 \times 5)^3)^x$ , then what is the value of x?

- Ans  A. 1  
 B. 6  
 C. 3  
 D. 0

Question ID : 1034357424

Q.6 A sum of Rs. 2542 is divided among P, Q and R such that if Rs. 13, Rs. 19 and Rs. 14 will be diminished from the shares of P, Q and R respectively, then their shares will be in the ratio 17 : 16 : 15. What is the initial share of R?

- Ans  A. Rs. 720  
 B. Rs. 794  
 C. Rs. 660  
 D. Rs. 780

Question ID : 1034357432

Q.7 What is the value of  $\sqrt{3} + \sqrt{93 - 36\sqrt{3}}$  ?

- Ans
- A.  $3 + \sqrt{3}$
  - B.  $9 + \sqrt{3}$
  - C.  $3 - \sqrt{3}$
  - D.  $9 - \sqrt{3}$

Question ID : 1034357425

Q.8 Perimeter of a rectangle is six times of its breadth. If breadth of the rectangle is 15 cm, then what is the area of this rectangle?

- Ans
- A.  $450 \text{ cm}^2$
  - B.  $300 \text{ cm}^2$
  - C.  $900 \text{ cm}^2$
  - D.  $600 \text{ cm}^2$

Question ID : 1034357437

Q.9 Rakesh covers a distance in 8 hours and Monu covers the same distance in 4 hours. If speed of Monu is 10 km/hr more than the speed of Rakesh, then which of the following statement(s) is/are correct? I. Speed of Monu is 30 km/hr. II. The distance covered by Rakesh is 80 km.

- Ans
- A. Both I and II
  - B. Only I
  - C. Neither I nor II
  - D. Only II

Question ID : 1034357435

Q.10 What is the value of 25 percent of 20 percent of 840?

- Ans
- A. 42
  - B. 40
  - C. 44
  - D. 45

Question ID : 1034357428

Q.11 If a number 867Y8 is exactly divisible by 6, then what can be the value of Y?

- Ans
- A. 3
  - B. 2
  - C. 1
  - D. 5

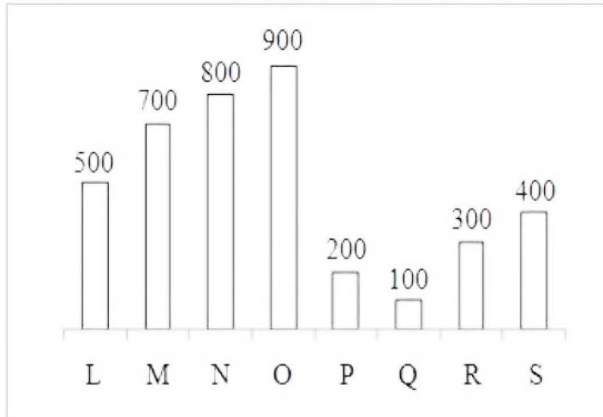
Question ID : 1034357423

Q.12 The present population of a town is 60000. It increases every year at the rate of 25 percent. What was the population of the town 2 years ago?

- Ans
- A. 38040
  - B. 38000
  - C. 41000
  - D. 38400

Question ID : 1034357429

Q.13 The bar graph given below shows the number of calculators sold by 8 different shops.



What is the ratio of number of total calculators sold by M and N to the number of total calculators sold by P and Q?

- Ans
- A. 6 : 1
  - B. 4 : 1
  - C. 3 : 1
  - D. 5 : 1

Question ID : 1034357440

Q.14 Radius of the base of a cylinder is 55 cm and its height is 15 cm. 14 times of the curved surface area of cylinder is equal to the total surface area of a cube. What is the side of a cube?

- Ans
- A. 110 cm
  - B. 120 cm
  - C. 150 cm
  - D. 140 cm

Question ID : 1034357438

Q.15 What is the value of  $88 \div 11 \times 5 - 8 \times 2 + 3$ ?

- Ans
- A. 27
  - B. 30
  - C. 24
  - D. 36

Question ID : 1034357422

Q.16 Raman and Kamal do  $(\frac{4}{9})$ th part of a work and the rest of the work is completed by Rohan. If Raman, Kamal and Rohan together take the same work for Rs. 18000, then what is the share of Rohan?

Ans  A. Rs. 10000

B. Rs. 12000

C. Rs. 14000

D. Rs. 8000

Question ID : 1034357436

Q.17 Average of 38 numbers is 92. If each number is divided by 5, then what will be the new average?

Ans  A. 18.3

B. 19.6

C. 18.4

D. 17.8

Question ID : 1034357427

Q.18 If a certain sum of money becomes thrice of itself in 8 years 6 months at simple interest, then what will be the annual rate of interest?

Ans  A. 24.78 percent

B. 23.52 percent

C. 21.28 percent

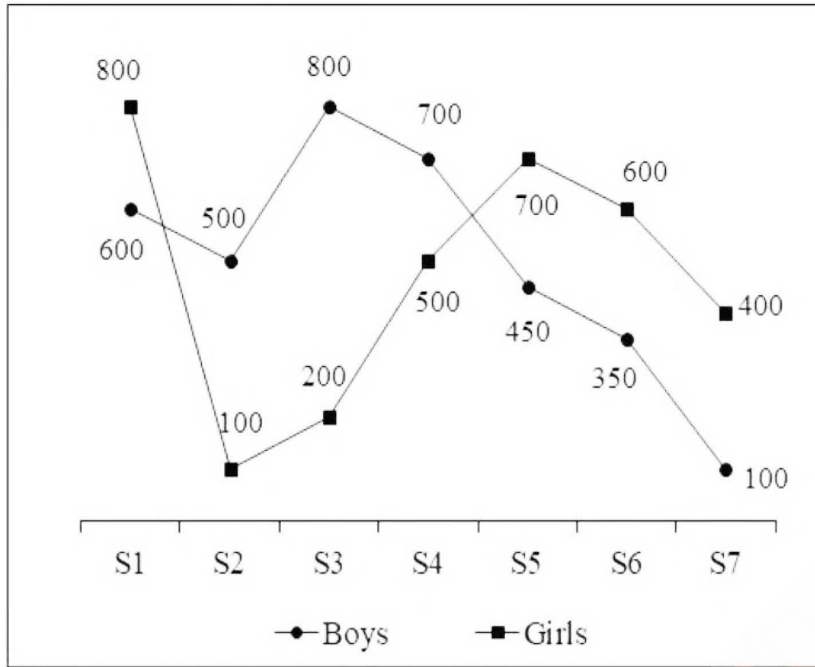
D. 24.48 percent

Question ID : 1034357433





Q.19 The line chart given below shows the number of boys and girls in 7 different schools in a year.



Which of the following statement is correct?

- I. The ratio of number of boys in school S2 to the number of girls in schools S2 is 5 : 1.
- II. The average of number of boys in schools S4, S5 and S6 is 500.
- III. The difference between total number of boys and total number of girls in all 7 schools is 200

- Ans
- A. II and III
  - B. I and III
  - C. I and II
  - D. I, II and III

Question ID : 1034357441

Q.20 What is the digit at the unit place  $25^{26} \times 34^{96} \times 88^{92}$  ?

- Ans
- A. 6
  - B. 2
  - C. 0
  - D. 5

Question ID : 1034357426

Section : General English

Q.1 Choose the word that means the same as the given word.  
Passionate

- Ans  A. Figure  
 B. Fervent  
 C. Folly  
 D. Fallacy

Question ID : 1034357450

Q.2 Choose the word that can substitute the given sentence.  
A person who talks in sleep

- Ans  A. Somniloquist  
 B. Abattoir  
 C. Omniscient  
 D. Orator

Question ID : 1034357456

Q.3 A sentence has been given with a blank to be filled with an appropriate word. Choose the correct alternative.  
My siblings and Naman \_\_\_\_\_ arriving today.

- Ans  A. are  
 B. have  
 C. was  
 D. is

Question ID : 1034357447

Q.4 Choose the word that is opposite in meaning to the given word.  
Surreptitious

- Ans  A. Imbibe  
 B. Indulge  
 C. Overt  
 D. Clandestine

Question ID : 1034357451

Q.5 Rearrange the parts of the sentence in correct order.  
P: As we know that some hobbies demand a little guidance from an experienced person.  
Q: Our sudden attachment to them without any knowledge may lead to wastage of money.  
R: The choice of hobbies is not an easy task.  
S: Due to this we may abandon them easily.

- Ans  A. RPQS  
 B. PQSR  
 C. PQRS  
 D. RSPQ

Question ID : 1034357449

Q.6 In the following question, out of the given four alternatives, select the alternative which best expresses the meaning of the Idiom/Phrase.  
In the seventh heaven

- Ans  A. To be very arrogant  
 B. Extremely happy  
 C. Be in opposition  
 D. Under no boundation

Question ID : 1034357455

Q.7 Rearrange the parts of the sentence in correct order.

Then I shall buy it  
P: And install it in my study  
Q: Back whatever the cost  
R: Winding it up and listening  
S: To have the time of my life

- Ans  A. QRPS  
 B. QPSR  
 C. SPQR  
 D. SPRQ

Question ID : 1034357448

Q.8 In the given question, four words are given out of which one word is correctly spelt.  
Choose the correctly spelt word.

- Ans  A. Bookeeper  
 B. Bookkeeper  
 C. Bookkeper  
 D. Bookkeepar

Question ID : 1034357453

Q.9 In the following question, out of the given four alternatives, select the alternative which best expresses the meaning of the Idiom/Phrase.  
To blow hot and cold

- Ans  A. Moving places to places  
 B. Caressing someone with love  
 C. To talk nonsense  
 D. To keep changing one's opinions

Question ID : 1034357454

Q.10 Find the part of the given sentence that has an error in it. If there is no error, choose 'No error'.  
Staying home is a (1)/sacrifice we are actively making (2)/for the good of another (3)/.No error (4)

- Ans  A. 1  
 B. 4  
 C. 3  
 D. 2

Question ID : 1034357443

Q.11 Select the most appropriate option to substitute the underlined segment in the given sentence. If no substitution is required, select 'No improvement' as your answer.

She has always been a descendant from royal family.

- Ans
- A. have always been descending from
  - B. has always been a descendant of
  - C. No improvement
  - D. has always been descending from

Question ID : 1034357445

Q.12 Select the most appropriate option to substitute the underlined segment in the given sentence. If no substitution is required, select 'No improvement' as your answer.

Neither does he nor his parents like Shaam.

- Ans
- A. nor the parent likes
  - B. nor his parents liked
  - C. neet his parents like
  - D. No improvement

Question ID : 1034357444

Q.13 Find the part of the given sentence that has an error in it. If there is no error, choose 'No error'.

Weather of South India is more (1)/ hotter than (2)/ that of North India (3)/ No error (4)

- Ans
- A. 4
  - B. 2
  - C. 1
  - D. 3

Question ID : 1034357442

Q.14 A sentence has been given with a blank to be filled with an appropriate word. Choose the correct alternative.

The lawyer's \_\_\_\_\_ explanations in the court made him lose the case.

- Ans
- A. lucid
  - B. vague
  - C. mad
  - D. placid

Question ID : 1034357446

Q.15 In the given question, four words are given out of which one word is correctly spelt. Choose the correctly spelt word.

- Ans
- A. Precious
  - B. Pressous
  - C. Prescious
  - D. Presious

Question ID : 1034357452

### Comprehension:

Read the following information carefully and answer the given questions.

Octopuses are famous for their alien-like abilities, from regrowing damaged arms to changing their skin colour and texture. They use this colour-shifting power to camouflage and, interestingly, as a strange visual language to talk to other octopuses.

A little known fact is they actually belong to a category of animals (phylum) called Mollusca, which is largely made up of snails. Yep, octopuses are like souped-up snails who lost their shells and grew a rather large brain. The greatest thing about them is their intelligence, which evolved completely independently from our own.

Let's consider their nervous system. Like us, octopus have large brains compared to their body size – easily the biggest of all invertebrates (animals without a backbone) and of comparable size to many vertebrates, such as frogs.

It is, however, hard to compare brain size between marine animals and land animals, because the laws of physics differ in water and air. Animals are weightless in water but on land body shape and size is limited by gravity. An octopus brain is made up of about 500 million brain cells (neurons). This is seven times more than a mouse and about the same as a marmoset monkey. Humans, on the other hand, have 86 billion brain cells.

Testing octopus intelligence can be a problem, because the animals frequently outsmart scientists. For example, scientists can struggle to get an octopus to solve a maze, because they often climb out and crawl over the top to reach their food reward. And that's assuming they haven't already escaped from their aquarium home and are crawling around the lab.

Unlike us though, octopuses don't live for very long. The giant Pacific octopus might live up to five years, but most live for just a year and some as little as six months. They hatch from eggs fully formed and ready to go. They never see their parents and have to learn everything on their own.

#### SubQuestion No : 16

Q.16 What can be an appropriate conclusion for the given passage?

- Ans  A. Octopuses have big brains and are crazy-smart.
- B. Octopuses change their behavior depending on the environment.
- C. Octopuses are alike humans in many ways.
- D. Octopuses don't live for very long.

Question ID : 1034357461



### Comprehension:

Read the following information carefully and answer the given questions.

Octopuses are famous for their alien-like abilities, from regrowing damaged arms to changing their skin colour and texture. They use this colour-shifting power to camouflage and, interestingly, as a strange visual language to talk to other octopuses.

A little known fact is they actually belong to a category of animals (phylum) called Mollusca, which is largely made up of snails. Yep, octopuses are like souped-up snails who lost their shells and grew a rather large brain. The greatest thing about them is their intelligence, which evolved completely independently from our own.

Let's consider their nervous system. Like us, octopus have large brains compared to their body size – easily the biggest of all invertebrates (animals without a backbone) and of comparable size to many vertebrates, such as frogs.

It is, however, hard to compare brain size between marine animals and land animals, because the laws of physics differ in water and air. Animals are weightless in water but on land body shape and size is limited by gravity. An octopus brain is made up of about 500 million brain cells (neurons). This is seven times more than a mouse and about the same as a marmoset monkey. Humans, on the other hand, have 86 billion brain cells.

Testing octopus intelligence can be a problem, because the animals frequently outsmart scientists. For example, scientists can struggle to get an octopus to solve a maze, because they often climb out and crawl over the top to reach their food reward. And that's assuming they haven't already escaped from their aquarium home and are crawling around the lab.

Unlike us though, octopuses don't live for very long. The giant Pacific octopus might live up to five years, but most live for just a year and some as little as six months. They hatch from eggs fully formed and ready to go. They never see their parents and have to learn everything on their own.

#### SubQuestion No : 17

Q.17 Why testing octopus intelligence can be a problem?

- Ans
- A. Because of their body shape and size.
  - B. Because they have a very large brain.
  - C. As they have so many legs.
  - D. Because they can outsmart scientists

Question ID : 1034357459



### Comprehension:

Read the following information carefully and answer the given questions.

Octopuses are famous for their alien-like abilities, from regrowing damaged arms to changing their skin colour and texture. They use this colour-shifting power to camouflage and, interestingly, as a strange visual language to talk to other octopuses.

A little known fact is they actually belong to a category of animals (phylum) called Mollusca, which is largely made up of snails. Yep, octopuses are like souped-up snails who lost their shells and grew a rather large brain. The greatest thing about them is their intelligence, which evolved completely independently from our own.

Let's consider their nervous system. Like us, octopus have large brains compared to their body size – easily the biggest of all invertebrates (animals without a backbone) and of comparable size to many vertebrates, such as frogs.

It is, however, hard to compare brain size between marine animals and land animals, because the laws of physics differ in water and air. Animals are weightless in water but on land body shape and size is limited by gravity. An octopus brain is made up of about 500 million brain cells (neurons). This is seven times more than a mouse and about the same as a marmoset monkey. Humans, on the other hand, have 86 billion brain cells.

Testing octopus intelligence can be a problem, because the animals frequently outsmart scientists. For example, scientists can struggle to get an octopus to solve a maze, because they often climb out and crawl over the top to reach their food reward. And that's assuming they haven't already escaped from their aquarium home and are crawling around the lab.

Unlike us though, octopuses don't live for very long. The giant Pacific octopus might live up to five years, but most live for just a year and some as little as six months. They hatch from eggs fully formed and ready to go. They never see their parents and have to learn everything on their own.

SubQuestion No : 18

Q.18 A marmoset monkey has \_\_\_\_\_ brain cells.

- Ans
- A. 78 million
  - B. about 500 million
  - C. less than 86 million
  - D. 86 billion

Question ID : 1034357458



### Comprehension:

Read the following information carefully and answer the given questions.

Octopuses are famous for their alien-like abilities, from regrowing damaged arms to changing their skin colour and texture. They use this colour-shifting power to camouflage and, interestingly, as a strange visual language to talk to other octopuses.

A little known fact is they actually belong to a category of animals (phylum) called Mollusca, which is largely made up of snails. Yep, octopuses are like souped-up snails who lost their shells and grew a rather large brain. The greatest thing about them is their intelligence, which evolved completely independently from our own.

Let's consider their nervous system. Like us, octopus have large brains compared to their body size – easily the biggest of all invertebrates (animals without a backbone) and of comparable size to many vertebrates, such as frogs.

It is, however, hard to compare brain size between marine animals and land animals, because the laws of physics differ in water and air. Animals are weightless in water but on land body shape and size is limited by gravity. An octopus brain is made up of about 500 million brain cells (neurons). This is seven times more than a mouse and about the same as a marmoset monkey. Humans, on the other hand, have 86 billion brain cells.

Testing octopus intelligence can be a problem, because the animals frequently outsmart scientists. For example, scientists can struggle to get an octopus to solve a maze, because they often climb out and crawl over the top to reach their food reward. And that's assuming they haven't already escaped from their aquarium home and are crawling around the lab.

Unlike us though, octopuses don't live for very long. The giant Pacific octopus might live up to five years, but most live for just a year and some as little as six months. They hatch from eggs fully formed and ready to go. They never see their parents and have to learn everything on their own.

### SubQuestion No : 19

Q.19 Identify the correct statement from the following. I. Octopuses belong to a category of animals called Mollusca. II. It is hard to compare brain size between marine animals and land animals. III. Vertebrates are animals without a backbone.

- Ans
- A. Only III
  - B. I, II and III
  - C. I and II
  - D. II and III

Question ID : 1034357460





### Comprehension:

Read the following information carefully and answer the given questions.

Octopuses are famous for their alien-like abilities, from regrowing damaged arms to changing their skin colour and texture. They use this colour-shifting power to camouflage and, interestingly, as a strange visual language to talk to other octopuses.

A little known fact is they actually belong to a category of animals (phylum) called Mollusca, which is largely made up of snails. Yep, octopuses are like souped-up snails who lost their shells and grew a rather large brain. The greatest thing about them is their intelligence, which evolved completely independently from our own.

Let's consider their nervous system. Like us, octopus have large brains compared to their body size – easily the biggest of all invertebrates (animals without a backbone) and of comparable size to many vertebrates, such as frogs.

It is, however, hard to compare brain size between marine animals and land animals, because the laws of physics differ in water and air. Animals are weightless in water but on land body shape and size is limited by gravity. An octopus brain is made up of about 500 million brain cells (neurons). This is seven times more than a mouse and about the same as a marmoset monkey. Humans, on the other hand, have 86 billion brain cells.

Testing octopus intelligence can be a problem, because the animals frequently outsmart scientists. For example, scientists can struggle to get an octopus to solve a maze, because they often climb out and crawl over the top to reach their food reward. And that's assuming they haven't already escaped from their aquarium home and are crawling around the lab. Unlike us though, octopuses don't live for very long. The giant Pacific octopus might live up to five years, but most live for just a year and some as little as six months. They hatch from eggs fully formed and ready to go. They never see their parents and have to learn everything on their own.

SubQuestion No : 20

Q.20 What is the synonym of the word-'strange' as used in the passage?

- Ans
- A. Conventional
  - B. Deify
  - C. Peculiar
  - D. Vulnerable

Question ID : 1034357462

Section : General Hindi

Q.1 निम्नलिखित प्रश्न में, दिए गए चार विकल्पों में से, उस विकल्प का चयन करें जो दिए गए मुहावरे के अर्थ को सर्वश्रेष्ठ रूप से व्यक्त करता है।  
खाकर डकार नहीं लेना

- Ans
- A. हजम न होना
  - B. हजम कर जाना
  - C. परवाह नहीं करना
  - D. बदनाम होना

Question ID : 1034357477

Q.2 निम्नलिखित वाक्यों में से संयुक्त वाक्य ज्ञात कीजिए।

- Ans
- A. वहाँ जाइए और बैठिये।
  - B. वहाँ जाकर बैठिये।
  - C. उधर जाक बैठिये।
  - D. जब आप वहाँ जाएँ तो बैठ जाएँ।

Question ID : 1034357472

Q.3 दिए गए वाक्य में क्रिया ज्ञात कीजिए।  
शिशु रो रहा है।

- Ans  A. पूर्वकालिक  
 B. सकर्मक  
 C. अकर्मक  
 D. संयुक्त

Question ID : 1034357465

Q.4 दिए गए शब्द का विलोम शब्द ज्ञात कीजिए।  
जटिल

- Ans  A. काव्य  
 B. कटु  
 C. कटोर  
 D. सरस

Question ID : 1034357466

Q.5 निम्नलिखित शब्द का पर्यायवाची नहीं है, ज्ञात कीजिए।  
नौका

- Ans  A. नाव  
 B. जलयान  
 C. तरिणी  
 D. सारंग

Question ID : 1034357468

Q.6 निम्नलिखित वाक्यों में से सरल वाक्य ज्ञात कीजिए।

- Ans  A. दिपांशु आया और आते ही रोने लगा।  
 B. दिपांशु आते ही रोने लगा।  
 C. जब दिपांशु आया तब वह रोने लगा।  
 D. जैसे ही दिपांशु आया वैसे ही रोने लगा।

Question ID : 1034357471

Q.7 निम्नलिखित प्रश्न में, दिए गए चार विकल्पों में से, उस विकल्प का चयन करें जो दिए गए मुहावरे के अर्थ को सर्वश्रेष्ठ रूप से व्यक्त करता है।  
जल-थल एक होना

- Ans  A. जल में थल दिखना  
 B. सफलता मिलना  
 C. जमीन आसमान एक करना  
 D. खूब वर्षा होना

Question ID : 1034357476

Q.8 दिए गए वाक्य का काल ज्ञात कीजिए।  
आधुनिक युग की मीरा महादेवी वर्मा ने मेरा परिवार नामक सस्मरण लिखा।

- Ans  A. अपूर्ण भूतकाल  
 B. पूर्ण भूतकाल  
 C. सामान्य भूतकाल  
 D. आसन्न भूतकाल

Question ID : 1034357473

Q.9 निम्नलिखित में से कौन-सा शब्द विदेशी शब्द नहीं है?

- Ans  A. तौलिया  
 B. फुनगी  
 C. तलाश  
 D. पटाखा

Question ID : 1034357464

Q.10 दिए गए शब्द युग्म का सही शब्द युग्म ज्ञात कीजिए।  
इंद्रा : इंद्र

- Ans  A. उद्धृत : देवी  
 B. देवी : शिक्षा  
 C. बाधा : इंद्राणी  
 D. इंद्राणी : सुरपति

Question ID : 1034357469

Q.11 दिए गए वाक्य में उपयुक्त विराम चिह्न का चयन कीजिए।  
चलो जल्दी चलो बस आ गई है।

- Ans  A. -  
 B. :-  
 C. ,  
 D. 0

Question ID : 1034357474

Q.12 दिए गए शब्द का प्रत्यय ज्ञात कीजिए।  
सुनार

- Ans  A. र  
 B. अर  
 C. नार  
 D. आर

Question ID : 1034357463

Q. 13 दिए गए वाक्य में उपयुक्त विराम चिह्न का चयन कीजिए।  
अमीना, तुम कब आई

- Ans  A. ;  
 B. ?  
 C. ...  
 D. :-

Question ID : 1034357475

Q. 14 निम्नलिखित वाक्य में रेखांकित भाग का वाक्यांश के लिए उचित शब्द का चयन कीजिए।  
जो कम बोलता हो

- Ans  A. अल्पभाषी  
 B. बहुश्रुत  
 C. बहुभाषाविद  
 D. बहुभाषी

Question ID : 1034357467

Q. 15 दिए गए शब्द में वचन ज्ञात कीजिए।  
चाय

- Ans  A. बहुवचन  
 B. त्रीवचन  
 C. द्विवचन  
 D. एकवचन

Question ID : 1034357470



Teachingninja.in

**Comprehension:**

एक गद्यांश दिया गया है। गद्यांश के आधार पर पाँच प्रश्न दिए गए हैं। गद्यांश को ध्यानपूर्वक पढ़ें तथा प्रत्येक प्रश्न के चार विकल्पों में से सही विकल्प चुने।

परसाई जी की रचना 'भोलाराम का जीव' एक व्यंग्य रचना है। इस रचना में लेखक ने एक मनुष्य की आत्मा के लुप्त हो जाने की घटना के माध्यम से शासकीय व्यवस्था, घूसखोरी जड़ता और यथार्थ का उद्घाटन किया है। यह कहानी सतही तौर पर एक व्यक्ति की व्यथा कथा दिखाई देती है, जो भ्रष्टाचार की चक्की में पिस रहा है, परन्तु इस कथा के पीछे लेखक की मानवीय करुणा और सामाजिक यथार्थ के प्रति आक्रोश झलकता है।

यह रचना स्वातन्त्र्योत्तर भारत के सामाजिक यथार्थ की सशक्त प्रस्तुति है। एक मामूली सरकारी कर्मचारी रिटायर हो गया और पाँच साल तक पेंशन के लिए चक्कर लगाते-लगाते मर गया। उसके जीव को लेने जब यमदूत गया तो जीव यमदूत को चकमा देकर ऐसा गायब हुआ कि बहुत खोजने पर भी नहीं मिला। आखिरकार जब नारद जी उसे ढूँढते हुए स्वयं धरती पर आए तो वह जीव अपनी पेंशन फाइल में अटका हुआ पाया गया। आश्चर्य यह था कि नारद जी के कहने पर भी वह स्वर्ग में जाने को तैयार नहीं, क्योंकि उसका मन अपनी पेंशन फाइलों में ही अटक गया है। कहानी के माध्यम से परसाई जी यह बताना चाहते हैं कि जिस भ्रष्टाचार से आज हम दबे हुए हैं वह इतना सर्वव्यापी है कि आज उसकी पहुँच अलौकिक हो गई। इस कहानी के प्रारम्भ में ही लेखक स्वर्ग और नरक की दिव्यता अलौकिकता का मिथक तोड़ देते हैं।

मिथक तोड़ते हुए वे कहते हैं कि कुछ भी जीवन के बाहर नहीं है और जीवन से अधिक सत्य कुछ भी नहीं है। जिस अलौकिकता को आधार बनाकर धर्म के पुरोहित-पण्डे लोगों को ठगते हैं उस अलौकिकता को.. प्रारम्भ में ये वाक्य धराशायी कर देते हैं। यह मनुष्य की जय का गान है, क्योंकि परसाई जी की विचारधारा मानती है कि मनुष्य से बड़ा कुछ भी नहीं है। इस कहानी की शैली और भाषा अत्यधिक सरल व स्पष्ट है। इस कहानी का उद्देश्य भ्रष्टाचार की कथा कहना। भ्रष्टाचार कितना सनातन है, यह परसाई जी ने इस कहानी के माध्यम से स्पष्ट रूप से दिखाया है।

**SubQuestion No : 16**

Q. 16 लेखक ने समाज की किस व्यवस्था को उजागर किया है?

- Ans  A. सकारात्मक  
 B. भ्रष्टाचार  
 C. अलौकिक  
 D. आशावादी

Question ID : 1034357480

**Comprehension:**

एक गद्यांश दिया गया है। गद्यांश के आधार पर पाँच प्रश्न दिए गए हैं। गद्यांश को ध्यानपूर्वक पढ़ें तथा प्रत्येक प्रश्न के चार विकल्पों में से सही विकल्प चुने।

परसाई जी की रचना 'भोलाराम का जीव' एक व्यंग्य रचना है। इस रचना में लेखक ने एक मनुष्य की आत्मा के लुप्त हो जाने की घटना के माध्यम से शासकीय व्यवस्था, घूसखोरी जड़ता और यथार्थ का उद्घाटन किया है। यह कहानी सतही तौर पर एक व्यक्ति की व्यथा कथा दिखाई देती है, जो भ्रष्टाचार की चक्की में पिस रहा है, परन्तु इस कथा के पीछे लेखक की मानवीय करुणा और सामाजिक यथार्थ के प्रति आक्रोश झलकता है।

यह रचना स्वातन्त्र्योत्तर भारत के सामाजिक यथार्थ की सशक्त प्रस्तुति है। एक मामूली सरकारी कर्मचारी रिटायर हो गया और पाँच साल तक पेंशन के लिए चक्कर लगाते-लगाते मर गया। उसके जीव को लेने जब यमदूत गया तो जीव यमदूत को चकमा देकर ऐसा गायब हुआ कि बहुत खोजने पर भी नहीं मिला। आखिरकार जब नारद जी उसे ढूँढते हुए स्वयं धरती पर आए तो वह जीव अपनी पेंशन फाइल में अटका हुआ पाया गया। आश्चर्य यह था कि नारद जी के कहने पर भी वह स्वर्ग में जाने को तैयार नहीं, क्योंकि उसका मन अपनी पेंशन फाइलों में ही अटक गया है। कहानी के माध्यम से परसाई जी यह बताना चाहते हैं कि जिस भ्रष्टाचार से आज हम दबे हुए हैं वह इतना सर्वव्यापी है कि आज उसकी पहुँच अलौकिक हो गई। इस कहानी के प्रारम्भ में ही लेखक स्वर्ग और नरक की दिव्यता अलौकिकता का मिथक तोड़ देते हैं।

मिथक तोड़ते हुए वे कहते हैं कि कुछ भी जीवन के बाहर नहीं है और जीवन से अधिक सत्य कुछ भी नहीं है। जिस अलौकिकता को आधार बनाकर धर्म के पुरोहित-पण्डे लोगों को ठगते हैं उस अलौकिकता को.. प्रारम्भ में ये वाक्य धराशायी कर देते हैं। यह मनुष्य की जय का गान है, क्योंकि परसाई जी की विचारधारा मानती है कि मनुष्य से बड़ा कुछ भी नहीं है। इस कहानी की शैली और भाषा अत्यधिक सरल व स्पष्ट है। इस कहानी का उद्देश्य भ्रष्टाचार की कथा कहना। भ्रष्टाचार कितना सनातन है, यह परसाई जी ने इस कहानी के माध्यम से स्पष्ट रूप से दिखाया है।

**SubQuestion No : 17**

Q. 17 जीव का मन कहाँ अटक हुआ था?

- Ans  A. शासन की व्यवस्था में  
 B. सरकारी दफ्तर में  
 C. पेंशन की फाइल में  
 D. स्वर्ग में

Question ID : 1034357482

**Comprehension:**

एक गद्यांश दिया गया है। गद्यांश के आधार पर पाँच प्रश्न दिए गए हैं। गद्यांश को ध्यानपूर्वक पढ़ें तथा प्रत्येक प्रश्न के चार विकल्पों में से सही विकल्प चुनें।

परसाई जी की रचना 'भोलाराम का जीव' एक व्यंग्य रचना है। इस रचना में लेखक ने एक मनुष्य की आत्मा के लुप्त हो जाने की घटना के माध्यम से शासकीय व्यवस्था, घूसखोरी जड़ता और यथार्थ का उद्घाटन किया है। यह कहानी सतही तौर पर एक व्यक्ति की व्यथा कथा दिखाई देती है, जो भ्रष्टाचार की चक्की में पिस रहा है, परन्तु इस कथा के पीछे लेखक की मानवीय करुणा और सामाजिक यथार्थ के प्रति आक्रोश झलकता है।

यह रचना स्वातन्त्र्योत्तर भारत के सामाजिक यथार्थ की सशक्त प्रस्तुति है। एक मामूली सरकारी कर्मचारी रिटायर हो गया और पाँच साल तक पेंशन के लिए चक्कर लगाते-लगाते मर गया। उसके जीव को लेने जब यमदूत गया तो जीव यमदूत को चकमा देकर ऐसा गायब हुआ कि बहुत खोजने पर भी नहीं मिला। आखिरकार जब नारद जी उसे ढूँढते हुए स्वयं धरती पर आए तो वह जीव अपनी पेंशन फाइल में अटका हुआ पाया गया। आश्चर्य यह था कि नारद जी के कहने पर भी वह स्वर्ग में जाने को तैयार नहीं, क्योंकि उसका मन अपनी पेंशन फाइलों में ही अटक गया है। कहानी के माध्यम से परसाई जी यह बताना चाहते हैं कि जिस भ्रष्टाचार से आज हम दबे हुए हैं वह इतना सर्वव्यापी है कि आज उसकी पहुँच अलौकिक हो गई। इस कहानी के प्रारम्भ में ही लेखक स्वर्ग और नरक की दिव्यता अलौकिकता का मिथक तोड़ देते हैं।

मिथक तोड़ते हुए वे कहते हैं कि कुछ भी जीवन के बाहर नहीं है और जीवन से अधिक सत्य कुछ भी नहीं है। जिस अलौकिकता को आधार बनाकर धर्म के पुरोहित-पण्डे लोगों को ठगते हैं उस अलौकिकता को.. प्रारम्भ में ये वाक्य धराशायी कर देते हैं। यह मनुष्य की जय का गान है, क्योंकि परसाई जी की विचारधारा मानती है कि मनुष्य से बड़ा कुछ भी नहीं है। इस कहानी की शैली और भाषा अत्यधिक सरल व स्पष्ट है। इस कहानी का उद्देश्य भ्रष्टाचार की कथा कहना। भ्रष्टाचार कितना सनातन है, यह परसाई जी ने इस कहानी के माध्यम से स्पष्ट रूप से दिखाया है।

**SubQuestion No : 18**

Q.18 दी हुई रचना कौन-सी रचना है?

- Ans  A. शृंगारिक  
 B. व्यंग्य  
 C. हस्य  
 D. दुःखद

Question ID : 1034357479

**Comprehension:**

एक गद्यांश दिया गया है। गद्यांश के आधार पर पाँच प्रश्न दिए गए हैं। गद्यांश को ध्यानपूर्वक पढ़ें तथा प्रत्येक प्रश्न के चार विकल्पों में से सही विकल्प चुनें।

परसाई जी की रचना 'भोलाराम का जीव' एक व्यंग्य रचना है। इस रचना में लेखक ने एक मनुष्य की आत्मा के लुप्त हो जाने की घटना के माध्यम से शासकीय व्यवस्था, घूसखोरी जड़ता और यथार्थ का उद्घाटन किया है। यह कहानी सतही तौर पर एक व्यक्ति की व्यथा कथा दिखाई देती है, जो भ्रष्टाचार की चक्की में पिस रहा है, परन्तु इस कथा के पीछे लेखक की मानवीय करुणा और सामाजिक यथार्थ के प्रति आक्रोश झलकता है।

यह रचना स्वातन्त्र्योत्तर भारत के सामाजिक यथार्थ की सशक्त प्रस्तुति है। एक मामूली सरकारी कर्मचारी रिटायर हो गया और पाँच साल तक पेंशन के लिए चक्कर लगाते-लगाते मर गया। उसके जीव को लेने जब यमदूत गया तो जीव यमदूत को चकमा देकर ऐसा गायब हुआ कि बहुत खोजने पर भी नहीं मिला। आखिरकार जब नारद जी उसे ढूँढते हुए स्वयं धरती पर आए तो वह जीव अपनी पेंशन फाइल में अटका हुआ पाया गया। आश्चर्य यह था कि नारद जी के कहने पर भी वह स्वर्ग में जाने को तैयार नहीं, क्योंकि उसका मन अपनी पेंशन फाइलों में ही अटक गया है। कहानी के माध्यम से परसाई जी यह बताना चाहते हैं कि जिस भ्रष्टाचार से आज हम दबे हुए हैं वह इतना सर्वव्यापी है कि आज उसकी पहुँच अलौकिक हो गई। इस कहानी के प्रारम्भ में ही लेखक स्वर्ग और नरक की दिव्यता अलौकिकता का मिथक तोड़ देते हैं।

मिथक तोड़ते हुए वे कहते हैं कि कुछ भी जीवन के बाहर नहीं है और जीवन से अधिक सत्य कुछ भी नहीं है। जिस अलौकिकता को आधार बनाकर धर्म के पुरोहित-पण्डे लोगों को ठगते हैं उस अलौकिकता को.. प्रारम्भ में ये वाक्य धराशायी कर देते हैं। यह मनुष्य की जय का गान है, क्योंकि परसाई जी की विचारधारा मानती है कि मनुष्य से बड़ा कुछ भी नहीं है। इस कहानी की शैली और भाषा अत्यधिक सरल व स्पष्ट है। इस कहानी का उद्देश्य भ्रष्टाचार की कथा कहना। भ्रष्टाचार कितना सनातन है, यह परसाई जी ने इस कहानी के माध्यम से स्पष्ट रूप से दिखाया है।

**SubQuestion No : 19**

Q.19 सरकारी कर्मचारी कितने सालों तक पेंशन के लिए चक्कर लगता रहा?

- Ans  A. 5  
 B. 4  
 C. 6  
 D. 7

Question ID : 1034357481

**Comprehension:**

एक गद्यांश दिया गया है। गद्यांश के आधार पर पाँच प्रश्न दिए गए हैं। गद्यांश को ध्यानपूर्वक पढ़ें तथा प्रत्येक प्रश्न के चार विकल्पों में से सही विकल्प चुने।

परसाई जी की रचना 'भोलाराम का जीव' एक व्यंग्य रचना है। इस रचना में लेखक ने एक मनुष्य की आत्मा के लुप्त हो जाने की घटना के माध्यम से शासकीय व्यवस्था, घूसखोरी जड़ता और यथार्थ का उद्घाटन किया है। यह कहानी सतही तौर पर एक व्यक्ति की व्यथा कथा दिखाई देती है, जो भ्रष्टाचार की चक्की में पिस रहा है, परन्तु इस कथा के पीछे लेखक की मानवीय करुणा और सामाजिक यथार्थ के प्रति आक्रोश झलकता है।

यह रचना स्वातन्त्र्योत्तर भारत के सामाजिक यथार्थ की सशक्त प्रस्तुति है। एक मामूली सरकारी कर्मचारी रिटायर हो गया और पाँच साल तक पेंशन के लिए चक्कर लगाते-लगाते मर गया। उसके जीव को लेने जब यमदूत गया तो जीव यमदूत को चकमा देकर ऐसा गायब हुआ कि बहुत खोजने पर भी नहीं मिला। आखिरकार जब नारद जी उसे ढूँढ़ते हुए स्वयं धरती पर आए तो वह जीव अपनी पेंशन फाइल में अटका हुआ पाया गया। आश्चर्य यह था कि नारद जी के कहने पर भी वह स्वर्ग में जाने को तैयार नहीं, क्योंकि उसका मन अपनी पेंशन फाइलों में ही अटक गया है। कहानी के माध्यम से परसाई जी यह बताना चाहते हैं कि जिस भ्रष्टाचार से आज हम दबे हुए हैं वह इतना सर्वव्यापी है कि आज उसकी पहुँच अलौकिक हो गई। इस कहानी के प्रारम्भ में ही लेखक स्वर्ग और नरक की दिव्यता अलौकिकता का मिथक तोड़ देते हैं।

मिथक तोड़ते हुए वे कहते हैं कि कुछ भी जीवन के बाहर नहीं है और जीवन से अधिक सत्य कुछ भी नहीं है। जिस अलौकिकता को आधार बनाकर धर्म के पुरोहित-पण्डे लोगों को ठगते हैं उस अलौकिकता को.. प्रारम्भ में ये वाक्य धराशायी कर देते हैं। यह मनुष्य की जय का गान है, क्योंकि परसाई जी की विचारधारा मानती है कि मनुष्य से बड़ा कुछ भी नहीं है। इस कहानी की शैली और भाषा अत्यधिक सरल व स्पष्ट है। इस कहानी का उद्देश्य भ्रष्टाचार की कथा कहना। भ्रष्टाचार कितना सनातन है, यह परसाई जी ने इस कहानी के माध्यम से स्पष्ट रूप से दिखाया है।

**SubQuestion No : 20**

Q.20 "भ्रष्टाचार" शब्द का सही संधि- विच्छेद क्या होगा?

- Ans  A. भ्रष्ट + चार  
 B. भ्रष्ट + आचार  
 C. भ्रष्टा + चार  
 D. भ्रष्ट + अचार

Question ID : 1034357483

**Section : Discipline 1**

Q.1 Where did the Sanyasi Rebellion occur in the 1760s?

- Ans  A. Delhi  
 B. Odisha  
 C. Bengal  
 D. Bihar

Question ID : 1034357502

Q.2 In a Municipal Corporation, elected members are called \_\_\_\_\_.

- Ans  A. District collectors  
 B. Councillors  
 C. Administrative staff  
 D. Municipal commissioner

Question ID : 1034357501

Q.3 In the context of sensorimotor stage of cognitive development, which of the following pair is correctly matched?

- I. 8 to 12 month – Coordination of secondary schemes
- II. 12 to 18 month – Mental combinations

- Ans
- A. Only I
  - B. Both I and II
  - C. Only II
  - D. Neither I nor II

Question ID : 1034357494

Q.4 In the context of Early Human reflexes, which of the following pair is correctly matched?

- I. Babinski – Head turns; mouth opens
- II. Swimming – Makes well-coordinated swimming movements

- Ans
- A. Only II
  - B. Only I
  - C. Neither I nor II
  - D. Both I and II

Question ID : 1034357488

Q.5 In the context of five-factor model, which of the following statement is correct?

- I. It is a theoretical model, developed and tested by Costa and McCrae.
- II. It is based on the "Big five" factors underlying clusters of related personality traits.

- Ans
- A. Only II
  - B. Neither I nor II
  - C. Both I and II
  - D. Only I

Question ID : 1034357500

Q.6 In the context of physical development, what is ecological theory of perception?

- I. This theory was developed by Piaget and Bayley.
- II. It describes developing motor and perceptual abilities as interdependent parts of a functional system.

- Ans
- A. Both I and II
  - B. Neither I nor II
  - C. Only I
  - D. Only II

Question ID : 1034357491



Q.7 What is attachment?

- I. Reciprocal, enduring tie between infant and caregiver.
- II. Infant and caregiver both contribute to the quality of the relationship.

Ans  A. Both I and II

B. Neither I nor II

C. Only II

D. Only I

Question ID : 1034357497

Q.8 \_\_\_\_\_ is the Kochanska's term for obedience of a parent's order only in the presence of signs of ongoing parental control.

Ans  A. Committed compliance

B. Executive control

C. Inhibitory control

D. Situational compliance

Question ID : 1034357499

Q.9 In the context of gross motor skills, 5 years child can \_\_\_\_\_.

- I. Start, turn and stop effectively in games.
- II. Make a running jump of 28 to 36 inches.

Ans  A. Neither I nor II

B. Only I

C. Only II

D. Both I and II

Question ID : 1034357496

Q.10 Which of the following statements is correct about the play Nil Darpan?

- I. It was written by Dinabandhu Mitra.
- II. It was written before the revolt of 1857.
- III. The play deals with the exploitation of indigo farmers by the British.

Ans  A. II and III

B. I and III

C. Only I

D. I and II

Question ID : 1034357503

Q.11 \_\_\_\_\_ is the Piaget's term for organized patterns of behavior used in particular situation.

Ans  A. Academe

B. Schemes

C. Phoneme

D. Axoneme

Question ID : 1034357492

Q.12 \_\_\_\_\_ is internal standards of behaviour, which usually control one's conduct and produce emotional discomfort when violated.

- I. Conscience
- II. Self regulation

- Ans
- A. Both I and II
  - B. Only II
  - C. Only I
  - D. Neither I nor II

Question ID : 1034357498

Q.13 In the context of cognitive development, what is deferred imitation?

- I. It is a Bayley term.
- II. According to Piaget, it refers to reproduction of an observed behaviour after the passage of time.

- Ans
- A. Only I
  - B. Only II
  - C. Neither I nor II
  - D. Both I and II

Question ID : 1034357495

Q.14 \_\_\_\_\_ happens due to lack of oxygen, may cause brain damage.

- Ans
- A. Anoxia
  - B. Alzheimer
  - C. Dementia
  - D. Epilepsy

Question ID : 1034357485

Q.15 According to Piaget, \_\_\_\_\_ is the term for processes by which an infant learns to reproduce desired occurrences originally discovered by chance.

- Ans
- A. Instant reaction
  - B. Chain reactions
  - C. Circular reactions
  - D. Radio reaction

Question ID : 1034357493

Q.16 In the context of Asthma, which of the following statement is correct?

- I. It is a disease related to liver.
- II. It is characterized by coughing, wheezing and difficulty in breathing.

- Ans
- A. Neither I nor II
  - B. Only II
  - C. Only I
  - D. Both I and II

Question ID : 1034357489

Q.17 In the context of Motor Development, what is system of action?

I. Increasingly complex combination of skills.

II. It permits a wider or more precise range of movement and more control of the environment.

Ans  A. Neither I nor II

B. Both I and II

C. Only I

D. Only II

Question ID : 1034357490

Q.18 Which of the following statement describes state of Arousal in the context of physical development?

I. An infant's physiological and behavioral status at a given moment in the periodic daily cycle of wake fullness, sleep and activity.

II. Substance enclosed under pressure and a colloidal suspension of particles dispersed in air or gas.

Ans  A. Only I

B. Neither I nor II

C. Only II

D. Both I and II

Question ID : 1034357487

Q.19 In the context of neurons, which of the following pair is correctly matched?

I. Integration – Process by which neurons coordinate the activities of muscle groups.

II. Differentiation – Process by which neurons acquire specialized structure and function.

Ans  A. Only II

B. Both I and II

C. Only I

D. Neither I nor II

Question ID : 1034357486

Q.20 \_\_\_\_\_ is mechanical monitoring of fetal heartbeat during labour and delivery.

Ans  A. Compliance monitoring

B. Context monitoring

C. Electronic Fetal monitoring

D. Beneficiary monitoring

Question ID : 1034357484

Section : Discipline2

Q.1 \_\_\_\_\_ hearing loss is damage to the outer or middle ear which interferes with sound waves reaching the cochlea.

- I. Conductive
- II. Sensorineural

- Ans
- A. Only I
  - B. Neither I nor II
  - C. Only II
  - D. Both I and II

Question ID : 1034357510

Q.2 "It rolls on a small ball and has two or three buttons on the top". The statement given is describing which device of the computer?

- Ans
- A. Mouse
  - B. Data Cable
  - C. CPU
  - D. Keyboard

Question ID : 1034357520

Q.3 Which of the following statements is NOT correct about the Rights of Persons with Disabilities Act?

- I. It was passed in 2010.
- II. It states that people with disabilities have equal rights.
- III. The government has to provide free education and integrate children with disabilities in schools.

- Ans
- A. I and II
  - B. I and III
  - C. Only I
  - D. II and III

Question ID : 1034357504

Q.4 In the context of children with special needs, which of the following pairs is correct?

- I. Hearing Impairment – It may range from problems with expression or voice strength to complete voice lessness.
- II. Deafness – An extreme inability to discriminate conversational speech through the ear.

- Ans
- A. Both I and II
  - B. Only II
  - C. Neither I nor II
  - D. Only I

Question ID : 1034357509

Q.5 Special attention is given on four aspects for Multi Grade Teaching. Which of the following are those aspects?

- I. Classroom organization
- II. Pupils grouping
- III. Use of learning materials
- IV. Proper planning

- Ans
- A. I and IV
  - B. I, II, III and IV
  - C. II and III
  - D. Only III

Question ID : 1034357519

Q.6 In the context of levels of empowerment, which of the following pair is NOT correctly matched?

- I. Individual empowerment – Includes Socio-economic and political empowerment.
- II. Collective empowerment – Lies in collective consensus and action.

- Ans
- A. Only I
  - B. Neither I nor II
  - C. Both I and II
  - D. Only II

Question ID : 1034357506

Q.7 \_\_\_\_\_ is the essential skill, knowledge, attitude and behavior required for effective performance of a real-world task or activity.

- Ans
- A. Competency
  - B. Impotence
  - C. Debilitation
  - D. Deficiency

Question ID : 1034357522

Q.8 Which of the following activity is correctly matched in the context of constructive classroom?

- I. Experimentation – Students individually perform an experiment and then come together to discuss the results in the group.
- II. Project work – Students choose a topic as a project and complete the project and present their findings to the class.

- Ans
- A. Neither I nor II
  - B. Only II
  - C. Both I and II
  - D. Only I

Question ID : 1034357523

Q.9 Which of the following statements is correct about policies for the marginalised?  
I. The government provides subsidized hostels for students of marginalised communities.  
II. Reservation policy so that they have equal opportunities in education and jobs.  
III. They get benefits in taxes and sports.

- Ans  A. I and II  
 B. I and III  
 C. II and III  
 D. Only I

Question ID : 1034357505

Q.10 According to Piaget's stages of cognitive development, what is the approximate age of the sensorimotor stage?

- Ans  A. 12-16 years  
 B. 4-7 years  
 C. 2-7 years  
 D. 0-2 years

Question ID : 1034357514

Q.11 Which of the following aspects convince that an activity is going on properly in a classroom?

- I. Children are manipulating materials, trying different arrangements to solve a problem.  
II. Children could clearly state the objectives and cause of doing that activity.

- Ans  A. Only II  
 B. Only I  
 C. Both I and II  
 D. Neither I nor II

Question ID : 1034357518

Q.12 In which type of teaching style the Information and Communication Technology can be used to aid the teacher's presentation as well as to assist learners in their exploration?

- Ans  A. Combination of the Teacher - centered approach and Learner - centered approach  
 B. Teacher - centered approach  
 C. Learner - centered approach  
 D. Community - centered approach

Question ID : 1034357521

Q.13 The types of sitting arrangement of students depend on the \_\_\_\_\_.

- I. number of students  
II. nature of the activity

- Ans  A. Only I  
 B. Both I and II  
 C. Only II  
 D. Neither I nor II

Question ID : 1034357513

Q.14 Which of the following factors are influenced due to cognitive Impairment?

- I. Memory problems
- II. Language difficulties

- Ans
- A. Neither I nor II
  - B. Only I
  - C. Only II
  - D. Both I and II

Question ID : 1034357508

Q.15 Multi-grade teaching is prevalent in \_\_\_\_\_.

- I. rural areas with low population.
- II. Schools with less number of students.

- Ans
- A. Only II
  - B. Only I
  - C. Both I and II
  - D. Neither I nor II

Question ID : 1034357517

Q.16 Except \_\_\_\_\_ all the given materials are the examples of some of the most common prepared Teaching Learning Materials.

- Ans
- A. Coloured sticks
  - B. Flowers
  - C. Alphabet cards
  - D. Charts

Question ID : 1034357512

Q.17 Who among the following can be classified under the category of visually impaired?

- I. Children with poor vision.
- II. Children who can see light but no shapes.

- Ans
- A. Only II
  - B. Both I and II
  - C. Only I
  - D. Neither I nor II

Question ID : 1034357507

Q.18 The following lines are referring to which educational thinker.

'He believed that every student should be acquainted with the elements of his or her religion. His experiments in education started when he returned to South Africa in 1987.'

- Ans
- A. Mahatma Gandhi
  - B. Rabindranath Tagore
  - C. Jane Addams
  - D. Bertrand Russell

Question ID : 1034357515

Q.19 Which of the following attributes are important to use activity as a learning task?

- I. Management of available space.
- II. Process of assessment.
- III. Time management.

Ans  A. II and III

B. I, II and III

C. I and II

D. Only III

Question ID : 1034357516

Q.20 Which of the following activities is NOT encouraged in constructivist classroom?

Ans  A. Project work

B. Class discussion

C. Rote memorization

D. Field trips

Question ID : 1034357511

Section : Discipline3

Q.1 Which of the following statement is correct?

I. If n is even, then the formula for calculating median is Value of  $\frac{1}{2}(n+1)^{\text{th}}$  observation

II. If n is odd, then the formula for calculating median is:  $\frac{1}{2} \left[ \frac{n^{\text{th}}}{2} \text{observation} + \left[ \frac{n}{2} + 1 \right]^{\text{th}} \text{observation} \right]$

Ans  A. Both I and II

B. Neither I nor II

C. Only II

D. Only I

Question ID : 1034357537

Q.2 Atmosphere, solar system, landforms, lithosphere are the parts of which subject?

Ans  A. Psychology

B. Geography

C. Linguistics

D. Economics

Question ID : 1034357543



Q.3 Metric system has been accepted as the international standards (SI) of measurement with seven base units for length, mass, time, temperature, \_\_\_\_\_.

- I. Luminous intensity
- II. Amount of substance
- III. Electric Current

- Ans
- A. Only II
  - B. I, II and III
  - C. I and III
  - D. II and III

Question ID : 1034357536

Q.4 Creative expressions is an integral part of the environmental studies teaching and learning. What are the various forms of creative expression?

- I. Graphic arts
- II. Music
- III. Puppetry

- Ans
- A. Only III
  - B. I, II, and III
  - C. II and III
  - D. Only II

Question ID : 1034357541

Q.5 Which of the following pair is correctly matched in the context of language?

- I. Spoken language – Does not change over time
- II. Written language – changes very slowly

- Ans
- A. Only I
  - B. Both I and II
  - C. Only II
  - D. Neither I nor II

Question ID : 1034357532

Q.6 Institutional resources is one of the resources for environmental studies. Which of the following is NOT a institutional resource?

- Ans
- A. Universities
  - B. Advertisements
  - C. Banks
  - D. Office

Question ID : 1034357538

Q.7 Which of the following element is involved in language proficiency?

- I. Fluency
- II. Accuracy

- Ans
- A. Only II
  - B. Neither I nor II
  - C. Only I
  - D. Both I and II

Question ID : 1034357529

Q.8 As a classroom teacher, while following the problem solving method, you are advised to consider the some steps. Which of the following are those steps?  
I. Anticipate or identify problems.  
II. Generate alternative solutions.

- Ans
- A. Only II
  - B. Only I
  - C. Neither I nor II
  - D. Both I and II

Question ID : 1034357524

Q.9 As children acquire more English, chants, rhymes, and songs can form a real part of the learning process. How you can use these chants, rhymes and songs in your lessons?  
I. To revise vocabulary.  
II. For drama and to practice punctuation.

- Ans
- A. Neither I nor II
  - B. Both I and II
  - C. Only I
  - D. Only II

Question ID : 1034357527

Q.10 What is the sum of place value of 8 and face value of 6 in 687?

- Ans
- A. 68
  - B. 86
  - C. 806
  - D. 680

Question ID : 1034357534

Q.11 Which of the following statement is correct?  
I. If two planes intersect, then their intersection is a straight line.  
II. Through two different points one and only one straight line can be drawn.  
III. Through one point innumerable lines can be drawn.

- Ans
- A. I, II and III
  - B. I and III
  - C. Only III
  - D. II and III

Question ID : 1034357535

Q.12 In the context of language acquisition, which of the following pair is correctly matched?  
I. One word stage – Guriyaa(doll).  
II. Longer utterances – He wants an apple.

- Ans
- A. Only II
  - B. Neither I nor II
  - C. Only I
  - D. Both I and II

Question ID : 1034357526

Q.13 In the context of rhymes and songs, which of the following statement is correct?  
I. Children do not like to act when they see and hear their teacher saying rhymes and chants.  
II. Children usually like singing and performing.

- Ans  A. Neither I nor II  
 B. Only II  
 C. Only I  
 D. Both I and II

Question ID : 1034357528

Q.14 'Nirmala's father, a farmer, has been invited by her teacher to help children understand better about plants in general.' This given statement represents which of the following resources used for environmental studies?

- Ans  A. Community resources  
 B. Human made resources  
 C. Media resources  
 D. Resource in nature

Question ID : 1034357539

Q.15 In the context of reading which of the following statement is correct?  
I. It is being able to conceptualize or form concepts, link ideas and keep them in mind.  
II. It means to pronounce pieces of the word.

- Ans  A. Only I  
 B. Neither I nor II  
 C. Both I and II  
 D. Only II

Question ID : 1034357531

Q.16 Which of the following statement is NOT correct?  
I. 1 is neither a prime nor a composite number  
II. 4 is smallest composite number

- Ans  A. Both I and II  
 B. Only II  
 C. Only I  
 D. Neither I nor II

Question ID : 1034357533

Q.17 Which of the following combination is correct?

- I. A teacher is correcting a student's written response about a bird's behavior – Informal assessment
- II. A teacher is listening to a conversation between two students where one of them is describing the birds that he observed at his uncle's farm – Formal assessment

- Ans
- A. Only I
  - B. Both I and II
  - C. Neither I nor II
  - D. Only II

Question ID : 1034357540

Q.18 How environmental studies and cooperative learning encourage teachers?

- I. To appreciate that people are different and that diversity is critical for a democratic society.
- II. To help children value cooperation.
- III. To go beyond the boundaries of a single subject or a grade.

- Ans
- A. Only I
  - B. Only II
  - C. I, II and III
  - D. II and III

Question ID : 1034357542

Q.19 Which of the following is NOT the characteristic of discovery method?

- I. A problem with its objective mentioned clearly is assigned to the class and each child is made to feel responsible for finding out something for himself/herself.
- II. Help is provided whenever the students feel the need. However, the teacher should try to get everything out of the students by inductive method.

- Ans
- A. Only II
  - B. Neither I nor II
  - C. Only I
  - D. Both I and II

Question ID : 1034357525

Q.20 Which of the following ability helps us to increase our knowledge?

- I. Idleness
- II. Reading

- Ans
- A. Only II
  - B. Both I and II
  - C. Neither I nor II
  - D. Only I

Question ID : 1034357530

Section : Discipline4

Q.1 The first aid mentioned below is provided in which of the following situation?  
"Put the child on his belly and press him on the back to expel water out of lungs"

- Ans
- A. Burns
  - B. Fainting
  - C. Snake bite
  - D. Drowning

Question ID : 1034357559

Q.2 \_\_\_\_\_ is done monthly by measuring height and weight of the child.

- Ans
- A. Immunisation
  - B. Comprehensive health assessment
  - C. Free medication
  - D. Dental checkup

Question ID : 1034357560

Q.3 दूसरी और तीसरी कक्षा के छात्रों के लिए अच्छी नागरिकता के विषय क्या होने चाहिए?  
I. नियमों से काम करना और खेलना।  
II. दूसरों के अधिकार को पहचानना।  
III. बढ़ती स्वतंत्रता के साथ सही या गलत को ध्यान में रखते हुए निर्णय लेना।

- Ans
- A. I, II तथा III
  - B. I तथा II
  - C. I तथा III
  - D. II तथा III

Question ID : 1034357563

Q.4 'The Adolescent Society' seminal work of James Coleman speaks of \_\_\_\_\_.  
I. A teenage subculture  
II. Adolescent societies

- Ans
- A. Only II
  - B. Neither I nor II
  - C. Only I
  - D. Both I and II

Question ID : 1034357555

Q.5 Except \_\_\_\_\_ all are the developmental characteristics of adolescents.

- Ans
- A. Socio-emotional
  - B. Moral
  - C. Intellectual
  - D. Economical

Question ID : 1034357553

Q.6 Which of the following statement is NOT correct?

- Ans  A. Total playing duration of a kabaddi match is 40 minutes
- B. In badminton, If the shuttlecock flew away from the white boundaries, then it will not be counted and the opponent will get the point
- C. The cricket pitch is 18 yards
- D. In basketball, free throw is a shot toward a fouled player

Question ID : 1034357551

Q.7 'Mahesh and Suresh are taking turns to push each other on the swing.' This statement describes which type of play?

- I. Cooperative play  
II. Solitary play

- Ans  A. Only II
- B. Only I
- C. Neither I nor II
- D. Both I and II

Question ID : 1034357550

Q.8 Under healthful school environment, which of the following are the responsibilities of a teacher?

- I. Maintain his/her own health practices/behaviors as example of good practice.  
II. Encourage children to accept responsibilities for an orderly and sanitary environment.

- Ans  A. Only I
- B. Both I and II
- C. Only II
- D. Neither I nor II

Question ID : 1034357562

Q.9 Which of the following statement is correct regarding the cognitive social learning perspective represented by Hoffman?

- I. Adolescent's moral behavior and style of moral reasoning depends on their stage of cognitive development.  
II. He found mothers to be more influential than fathers in determining adolescent's moral outlook.

- Ans  A. Both I and II
- B. Only I
- C. Only II
- D. Neither I nor II

Question ID : 1034357556

Q.14 Traditional approach and Modern approach are adopted by social scientists in understanding political science. Which of the following statement is correct about these approaches?

I. Traditional approach insists on quantitative and inductive approach and aims at making politics a scientific body of knowledge.

II. Modern approach defines political science as an objective, scientific and process oriented task.

- Ans
- A. Both I and II
  - B. Only II
  - C. Only I
  - D. Neither I nor II

Question ID : 1034357544

Q.15 In which development of child, 'Play' performs its role?

I. Physical and motor development

II. Language development

III. Cognitive development

- Ans
- A. II and III
  - B. I, II and III
  - C. I and III
  - D. I and II

Question ID : 1034357548

Q.16 Which of the following pairs is correctly matched in the context of Art?

I. Mudras – hand gestures that help in communication with audience.

II. Property – objects that are used to create a situation.

- Ans
- A. Only II
  - B. Neither I nor II
  - C. Only I
  - D. Both I and II

Question ID : 1034357546

Q.17 National Programme for Youth and Adolescent Development (NPYAP) was launched by the Ministry of Youth affairs and sports of India. The scheme is meant for the adolescents belonging to the age group of \_\_\_\_\_.

- Ans
- A. 10-19 years
  - B. 15-18 years
  - C. 12-21 years
  - D. 8-15 years

Question ID : 1034357554

Q.18 Which of the following Rasa is correctly paired with their meaning?

- I. Srngaram – Wonder
- II. Santham – Tranquility

- Ans
- A. Only II
  - B. Neither I nor II
  - C. Both I and II
  - D. Only I

Question ID : 1034357547

Q.19 What are the characteristics of a physical education program?

- I. Develops personal skills.
- II. Encourages active participation.
- III. Promotes the development of positive attitudes.

- Ans
- A. I and II
  - B. Only II
  - C. I, II and III
  - D. I and III

Question ID : 1034357561

Q.20 Council of Boards of School Education (COBSE) joined the efforts of various organization to increase adolescent students' access to relevant knowledge and life skills education through integration into the process and content of school education. The strategies for integration includes which of the following?

- I. Ad-hoc infusion approach.
- II. Integration of a comprehensive unit on adolescence education in one or two subjects.
- III. Integration of adolescence education elements with selected 'mother' subjects.

- Ans
- A. Only I
  - B. I and II
  - C. I, II and III
  - D. II and III

Question ID : 1034357558

Section : Discipline5

Q.1 \_\_\_\_\_ can bring about the understanding of another.

- I. Despise
- II. Love

- Ans
- A. Both I and II
  - B. Neither I nor II
  - C. Only II
  - D. Only I

Question ID : 1034357569



Q.2 Which of the following stages are correctly placed in reference with the learning process in work education?

- Ans  A. To activate plan, To plan, To set the goals, Evaluation  
 B. To set the goals, To plan, To activate the plan, Evaluation  
 C. To plan, To activate the plan, Evaluation, To set the goals  
 D. To set the goals, Evaluation, To plan, To activate the plan

Question ID : 1034357566

Q.3 In India, local bodies constitute \_\_\_\_\_.

- I. Zila Board  
II. Village Panchayats  
III. Municipal Board

- Ans  A. I and II  
 B. I and III  
 C. II and III  
 D. I, II and III

Question ID : 1034357579

Q.4 What is the highest function of education?

- I. To bring about an integrated individual who is capable of dealing with life as a whole.  
II. It leads to enmity and ruthlessness.

- Ans  A. Only I  
 B. Neither I nor II  
 C. Only II  
 D. Both I and II

Question ID : 1034357570

Q.5 Which of the following is the quality of Management?

- I. Control  
II. Planning and coordination

- Ans  A. Neither I nor II  
 B. Both I and II  
 C. Only I  
 D. Only II

Question ID : 1034357577

Q.6 In India, Village Education Committees (VEC) were constituted under which programme?

- Ans  A. Non-formal education scheme  
 B. District primary education programme  
 C. Mahila samakya  
 D. Operation blackboard

Question ID : 1034357581

Q.7 Which of the following statement is correct in the context of community participation in the states?

- I. In West Bengal the micro level database of children is maintained.
- II. In Manipur Education Volunteers in EGS/AIE centers was appointed.

- Ans
- A. Only II
  - B. Both I and II
  - C. Neither I nor II
  - D. Only I

Question ID : 1034357573

Q.8 According to RTE, which of the following statement is correct in the context of composition of school management committees?

- I. 75 percent of members will be the teachers of school.
- II. 25 percent of members will be of local authorities.

- Ans
- A. Only I
  - B. Both I and II
  - C. Only II
  - D. Neither I nor II

Question ID : 1034357574

Q.9 Which of the following statement is correct in the context of teacher's relationship with the parents

- I. Teachers should hold parent's meeting and apprise them about their children's progress.
- II. Teacher also involve the parents in the growth and development of their children.

- Ans
- A. Only I
  - B. Neither I nor II
  - C. Both I and II
  - D. Only II

Question ID : 1034357583

Q.10 What are the main factors of the syllabus at primary and upper primary level?

- I. Environment studies and its uses
- II. Materials, tools and experiments
- III. Practice

- Ans
- A. I and II
  - B. Only I
  - C. I, II and III
  - D. II and III

Question ID : 1034357564

Q.11 Which of the following statement is correct in the context of 'Laissez faire Leadership'?

- I. It allows the employees to make their decision.  
II. This leadership is pessimistic about people.

- Ans  A. Both I and II  
 B. Only I  
 C. Only II  
 D. Neither I nor II

Question ID : 1034357578

Q.12 स्कूल के संदर्भ में, यदि माता-पिता वास्तव में अपने बच्चों से प्यार करते हैं, तो वे \_\_\_\_\_ के लिए कानून लागू करेंगे।

- I. सही प्रकार के शिक्षकों के साथ छोटे स्कूलों की स्थापना करने के लिए।  
II. उनकी गुणवत्ता के बारे में सोचे बिना सबसे कम फीस वाले स्कूलों की स्थापना करने के लिए।

- Ans  A. केवल II  
 B. I तथा II दोनों  
 C. ना ही I ना ही II  
 D. केवल I

Question ID : 1034357571

Q.13 Which of the following community initiative is correctly matched with their state?

- I. Puppet Shows – West Bengal  
II. Bal Mela – Kerala

- Ans  A. Neither I nor II  
 B. Only I  
 C. Both I and II  
 D. Only II

Question ID : 1034357580

Q.14 मूल्यांकन के संदर्भ में निम्नलिखित में से कौन सा कथन सही है?

- I. अंक देना ग्रेड देने से ज्यादा उपयुक्त है।  
II. आकलन मूल्यांकन से अधिक व्यापक है।  
III. मूल्यांकन प्रक्रिया में बच्चों को कार्य प्रक्रिया से जुड़े रहने के लिए प्रोत्साहित किया जा सकता है।

- Ans  A. II तथा III  
 B. केवल III  
 C. I तथा II  
 D. I, II तथा III

Question ID : 1034357568

Q.15 Who stressed on the need to introduce school and community classes?

- Ans  A. Jawaharlal Nehru  
 B. Subhash Chandra Bose  
 C. Mahatma Gandhi  
 D. Gopal Krishan Gokhale

Question ID : 1034357567

Q.16 Which of the following is NOT the non-monetary indirect benefit of education?

- I. Money earning of the individual.
- II. Values of good citizenship.
- III. The knowledge, skills, attitudes towards work-culture.

- Ans
- A. I and III
  - B. I and II
  - C. I, II and III
  - D. II and III

Question ID : 1034357582

Q.17 \_\_\_\_\_ बहुत बड़े उद्योग या मनुष्य के दैनिक जीवन में महत्वपूर्ण भूमिका निभाता है।

- I. सामग्री
- II. उपकरण और तकनीक
- III. अकुशल श्रम

- Ans
- A. II तथा III
  - B. I तथा II
  - C. केवल I
  - D. I, II तथा III

Question ID : 1034357565

Q.18 Who advocated the use of a local craft like 'CHARKHA for Khadi'?

- Ans
- A. Mahatma Gandhi
  - B. Moti Lal Nehru
  - C. Sarojini Naidu
  - D. Bhagat Singh

Question ID : 1034357575

Q.19 Which of the following is an outcome of strong management and strong leadership?

- I. Well motivated team
- II. Ineffective and dull team

- Ans
- A. Both I and II
  - B. Only I
  - C. Neither I nor II
  - D. Only II

Question ID : 1034357576

Q.20 Which of the following is correct regarding RTE Act 2009?

- I. Schools will have separate toilet for girls and boys.
- II. Schools shall have adequate number of teachers and classrooms.

- Ans
- A. Both I and II
  - B. Only II
  - C. Only I
  - D. Neither I nor II

Question ID : 1034357572