



# Teachingninja.in

**DSSSB PRT 26 March 2022 Shift 3**

- ★ Latest Govt Job updates
- ★ Private Job updates
- ★ Free Mock tests available

**Visit - [teachingninja.in](https://teachingninja.in)**

Test Date	26/03/2022
Test Time	4:30 PM - 6:30 PM
Subject	ASSISTANT TEACHER PRIMARY

Section : Mental Ability

Q.1 Out of the given options, three are similar in a certain manner. However, one option is NOT like the other three. Select the option which is different from the rest.

Ans  A. 231

B. 391

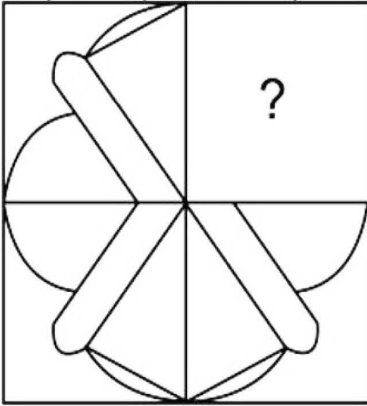
C. 493

D. 357

Question ID : 75322912566



Q.2 Which of the following answer figures, when placed in the blank space would complete the pattern in the question figure?



Ans  A. A

IMAGE



B. C

IMAGE



C. D

IMAGE



D. B

IMAGE



Question ID : 75322912569

Q.3 Out of the given options, three are similar in a certain manner. However, one option is NOT like the other three. Select the option which is different from the rest.

Ans  A. WSXZ

B. NJLO

C. SQQT

D. HDFI

Question ID : 75322912557

Q.4 Select the option that is related to the third term on the same basis as the second term is related to the first term.  
MN:LO :: TG: ?

- Ans  A. SH  
 B. WD  
 C. HS  
 D. AZ

Question ID : 75322912558

Q.5 Insert the letters that complete the first word and begin the second.  
EX ( \_ \_ \_ ) ACLE

- Ans  A. TANT  
 B. PERT  
 C. TENT  
 D. ENCE

Question ID : 75322912556

Q.6 In a certain code language,  
'72' means 'very good'  
'216' means 'a good day'  
'643' means 'day is beautiful'  
What is the code for 'day'?

- Ans  A. 4  
 B. 6  
 C. 7  
 D. 2

Question ID : 75322912560

Q.7 Four students A, B, C and D took an examination. In the results, B was immediately followed by A but no one was after A. C was ahead of B but could not score as much as D. Who among them scored the second highest?

- Ans  A. A  
 B. C  
 C. B  
 D. D

Question ID : 75322912563

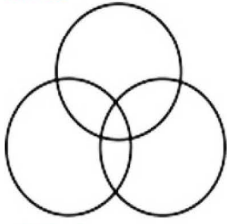
Q.8 Which letter among the following alphabet is the 8th letter to right of 17th letter from right?  
A B C D E F G H I J K L M N O P Q R S T U V W X Y Z

- Ans  A. K  
 B. Q  
 C. R  
 D. N

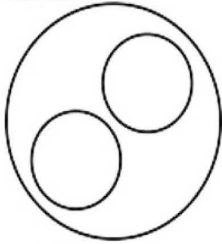
Question ID : 75322912561

Q.9 Which of the following Venn diagram best represents the relationship between plants, cactus, living beings?


Ans  A. A  
IMAGE



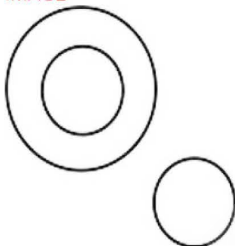
B. C  
IMAGE



C. B  
IMAGE



D. D  
IMAGE




Question ID : 75322912568

Q.10 Complete the following letter series:  
a\_cdb\_da\_da\_da\_c

Ans  A. bccbb  
 B. ccbbb  
 C. bccdb  
 D. acbda


Question ID : 75322912555

Q.11 From the given answer figures, select the one in which the question figure is embedded.




Ans  A. A

IMAGE



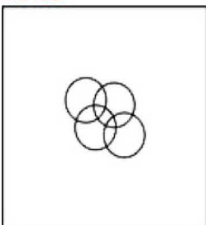
B. C

IMAGE



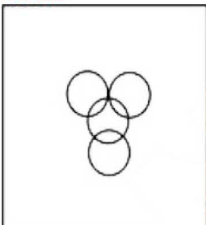
C. D

IMAGE



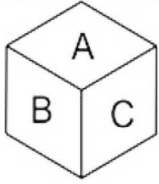
D. B

IMAGE




Question ID : 75322912573


Q.12 Four positions of the same dice is shown. Find the letter that will be opposite to A.



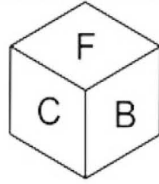
(i)



(ii)



(iii)



(iv)

- Ans
- A. B
  - B. F
  - C. C
  - D. E

Question ID : 75322912570

Q.13 In the question two statements are given, followed by two conclusions, I and II. You have to consider the statements to be true even if it seems to be at variance from commonly known facts. You have to decide which of the given conclusions, if any, follows from the given statements.

Statement 1 : All doctors are very intelligent.

Statement 2 : Juhi is studying second year medical.

Conclusion I : Juhi is very intelligent.

Conclusion II : Juhi has a bright future.

- Ans
- A. Only conclusion II follows
  - B. Both conclusion I and II follow
  - C. Either conclusion I or II follows
  - D. Only conclusion I follows

Question ID : 75322912564

Q.14 Select the option that is related to the third term on the same basis as the second term is related to the first term.

12:30 :: 20: ?

- Ans
- A. 35
  - B. 42
  - C. 32
  - D. 48

Question ID : 75322912567

Q.15 Looking at a woman sitting beside him, Varun said, " She is the daughter of the father of the sister of my brother". How is that woman related to Varun?

- Ans
- A. Daughter
  - B. Sister
  - C. Wife
  - D. Mother

Question ID : 75322912562

Q.16 Which of the answer figures is the right water image of the given figure?

RAJ589D8

Ans  A. C

IMAGE

8D82JVR

B. A

IMAGE

8D82LVR

C. D

IMAGE

8D82JAR

D. B

IMAGE

8D82LAR

Question ID : 75322912574



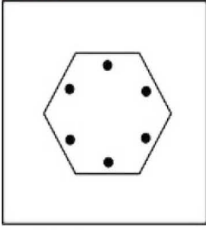
Teachingninja.in



Q.17 Out of the given options, three are similar in a certain manner. However, one option is NOT like the other three. Select the option which is different from the rest.


Ans  A. D

IMAGE




B. B

IMAGE



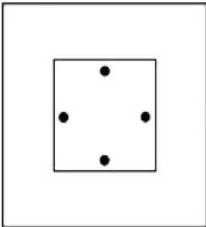
C. A

IMAGE



D. C

IMAGE



Question ID : 75322912571

Q.18 Select the option that is related to the third term on the same basis as the second term is related to the first term.

Sad: Cry :: Angry: ?

Ans  A. ShriII

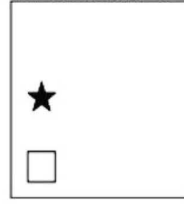
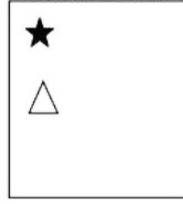


B. Shout

C. Roar

D. Cheer


Question ID : 75322912559

Q.19 Which of the following answer figures completes the series of the question figure?




Ans  A. B

IMAGE




B. C

IMAGE




C. D

IMAGE



D. A

IMAGE



Question ID : 75322912572

Q.20 In the question one statement is given, followed by three assumptions, I, II and III. You have to consider the statements to be true even if it seems to be at variance from commonly known facts. You have to decide which of the given assumptions, if any, follows from the given statement.  
Statement: " Buy 'X' T.V. for better picture quality."– An advertisement.  
Assumption I : 'X' T.V. is the only T.V. in the market.  
Assumption II : 'X' T.V. is the costliest.  
Assumption III : People generally ignore such advertisements.

- Ans  A. None is implicit  
 B. Only assumption I is implicit  
 C. Only assumption III is implicit.  
 D. Only assumption II is implicit

Question ID : 75322912565

Section : General Awareness

Q.1 Cox's Bazar in \_\_\_\_\_ has the world's longest natural sea beach.

- Ans  A. Bangladesh  
 B. South Africa  
 C. Ireland  
 D. Canada

Question ID : 75322912583

Q.2 Sifan Hassan broke a five-year-old world record in the 10,000m by 10.63 seconds, she is from which country?

- Ans  A. France  
 B. Netherlands  
 C. Belgium  
 D. Germany

Question ID : 75322912593

Q.3 Infrared light or heat is used for what purpose?

- Ans  A. Cooking food  
 B. Coloring the clothes  
 C. Washing clothes  
 D. Drying Floor

Question ID : 75322912581

Q.4 Powada is the Marathi poetry on valour. What is the meaning of Powada?

- Ans  A. Victory  
 B. To "glorify"  
 C. Grateful  
 D. Powerful

Question ID : 75322912576

Q.5 India's rank in Global Peace Index 2021 is: Select the correct option.

- Ans  A. 153rd  
 B. 125th  
 C. 135th  
 D. 116th

Question ID : 75322912590

Q.6 Lal Bahadur Shastri promoted which Revolution in India in 1965?

- Ans  A. Black  
 B. Red  
 C. Pink  
 D. Green

Question ID : 75322912591

Q.7 In 2021 which city won a Smart City Award in 2020 for Smart Water Metering Water ATM?

- Ans  A. Surat  
 B. Dehradun  
 C. Ahmedabad  
 D. Indore

Question ID : 75322912589

Q.8 GDP is the total monetary or market value of all the finished goods and services produced within a country's borders in a specific time period. What is the full form of GDP?

- Ans  A. Gross demand product  
 B. Gross domestic product  
 C. Gross double product  
 D. Gross domestic producers

Question ID : 75322912577

Q.9 When baking soda is heated with water which gas is released?

- Ans  A. Sodium oxide  
 B. Oxygen  
 C. Nitrogen  
 D. Carbon dioxide

Question ID : 75322912580

Q.10 Mohenjo-daro is an archaeological site in the province of Sindh, Pakistan. What is the meaning of Mohenjo-Daro?

- Ans  A. Mound of the Dead Men  
 B. Mound of the Happy Men  
 C. Mound of the Dreadful Men  
 D. Mound of the Great Men

Question ID : 75322912586

Q.11 Which is the most famous folk dance of Himachal Pradesh ?

- Ans  A. Jawara  
 B. Kathak  
 C. Rouf  
 D. Nati

Question ID : 75322912575

Q.12 From the following options choose the river which is called the smallest river in the world?

- Ans  A. Ombla  
 B. Amazon River  
 C. Roe River  
 D. Tamborasi River

Question ID : 75322912582

Q.13 Through which instrument the humidity of the atmosphere can be measured?

- Ans  A. Thermometer  
 B. Caliper  
 C. Hygrometer  
 D. Micrometer

Question ID : 75322912579

Q.14 Select from the following which is the hottest planet in the solar system?

- Ans  A. Venus  
 B. Mercury  
 C. Mars  
 D. Jupiter

Question ID : 75322912584

Q.15 Recently(as on August 2021), Defence Research and Development Organization (DRDO) have successfully test fired \_\_\_\_\_ rocket which is an indigenous development rocket system.

- Ans
- A. Agni
  - B. Pinaka
  - C. Shastra
  - D. Astra

Question ID : 75322912588

Q.16 Banawali is an archaeological site belonging to the Indus Valley Civilization period in which district of Haryana?

- Ans
- A. Fatehabad
  - B. Sirsa
  - C. Jind
  - D. Kurukshetra

Question ID : 75322912585

Q.17 Who was the third Prime Minister of India?

- Ans
- A. Indira Gandhi
  - B. Jawaharlal Nehru
  - C. Lal Bahadur Shastri
  - D. Morarji Desai

Question ID : 75322912592

Q.18 Sangam Age is the period from the \_\_\_\_\_ in south India.

- Ans
- A. 4th century BC to 4th century AD
  - B. 2nd century BC to 2nd century AD
  - C. 3rd century BC to 3rd century AD
  - D. 5th century BC to 5th century AD

Question ID : 75322912587

Q.19 Minimum Support Price is related to:

- Ans
- A. Mining
  - B. Fishing
  - C. Cement
  - D. Agricultural

Question ID : 75322912578

Q.20 The Dhyan Chand Award is officially known as Dhyan Chand Award for Lifetime Achievement in Sports and Games. What is the prize money for this award?

- Ans  A. Rs 10 lakh  
 B. Rs 3 lakh  
 C. Rs 15 lakh  
 D. Rs 5 lakh

Question ID : 75322912594

Section : Arithmetic Ability

Q.1 Find compound interest on Rs. 18000 at 13% per annum for 2 years, compounded annually.

- Ans  A. Rs.4848.2  
 B. Rs.4884  
 C. Rs.4948.2  
 D. Rs.4984.2

Question ID : 75322912606

Q.2 A train overtakes two persons who are walking in the same direction in which the train is going, at the rate of 4 kmph and 6 kmph and passes them completely in 12 seconds and 15 seconds respectively. The length of the train (in metres) is\_\_\_\_\_.

- Ans  A. 50 meter  
 B. 100/3 meter  
 C. 40 meter  
 D. 100 meter

Question ID : 75322912607

Q.3 The number which is divisible by 7 is\_\_\_\_\_.

- Ans  A. 252  
 B. 155  
 C. 352  
 D. 246

Question ID : 75322912595

Q.4 Two tanks of similar volume are full of a mixture of oil grade-A and grade-B. In the first, the ratio of grade-A and grade-B is 5:8 and in the second, it is 7:19. If both these tanks are poured in a larger tank, what would be the resultant ratio of grade-A and grade-B?

- Ans  A. 17:35  
 B. 17:13  
 C. 35:17  
 D. 13:17

Question ID : 75322912605

Q.5 If  $2^a \times 3^b \times 7^c = 1176$  then  $2^a + 3^b + 7^c =$  \_\_\_\_\_ ?

- Ans
- A. 70
  - B. 80
  - C. 50
  - D. 60

Question ID : 75322912599

Q.6 Two trains of length 220 m and 190 m respectively are running at the speed of 80 km/hr and 64 km/hr on parallel tracks in opposite directions. In what time they will cross each other?

- Ans
- A. 8.25 sec
  - B. 10 sec
  - C. 12.25 sec
  - D. 10.25 sec

Question ID : 75322912608

Q.7 If a shopkeeper offers a discount of 30% on the marked price of his goods and thus ends up selling at cost price, what was the % mark up?

- Ans
- A. 65
  - B. 75
  - C. 60
  - D. 42.86

Question ID : 75322912600

Q.8 If 8.6% of p is 43 then p = \_\_\_\_\_.

- Ans
- A. 600
  - B. 300
  - C. 500
  - D. 400

Question ID : 75322912601

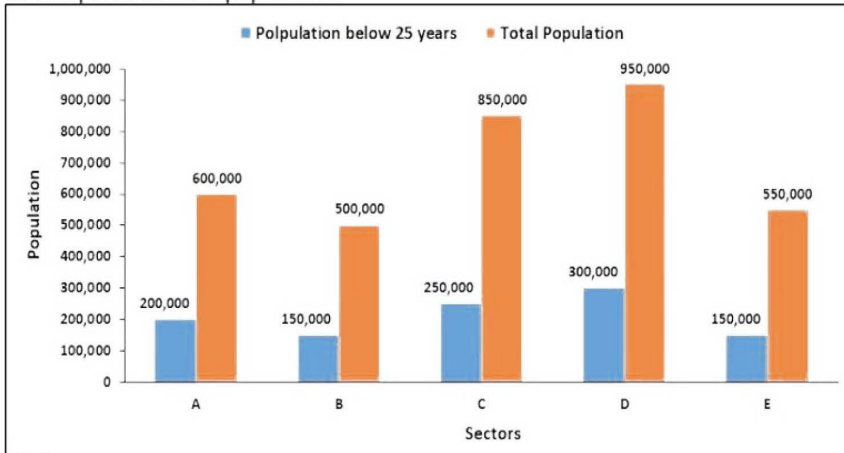
Q.9 If the sum of two numbers a,b is 99 and the H.C.F. and L.C.M. of these numbers are 3 and 660 respectively, then square of (a - b) is\_\_\_\_\_.

- Ans
- A. 1881
  - B. 1581
  - C. 2081
  - D. 1681

Question ID : 75322912598



Q.10 Population below 25 years and total population of different sectors in a locality is represented by the bar graph. Which sector has highest percent of below 25 years as compared to total population?



- Ans
- A. B
  - B. D
  - C. A
  - D. C

Question ID : 75322912613

Q.11 If  $2^p = 4 \times 2^q$  &  $9 \times 3^p = 3^{-q}$  then  $p - q =$  \_\_\_\_\_?

- Ans
- A. 3
  - B. -3
  - C. -2
  - D. 2

Question ID : 75322912596

Q.12 If  $p\%$  of 12 =  $q\%$  of 20, then  $(p-q) : q =$  \_\_\_\_\_.

- Ans
- A. 7:3
  - B. 4:3
  - C. 10:3
  - D. 2:3

Question ID : 75322912602

Q.13 If the sum of length, breadth, and height of a cuboid is 19 units, and length of its diagonal is 15 units, then the total surface area of the cuboid is \_\_\_\_\_.

- Ans
- A. 78 sq.units
  - B. 136 sq.units
  - C. 232 sq.units
  - D. 68 sq.units

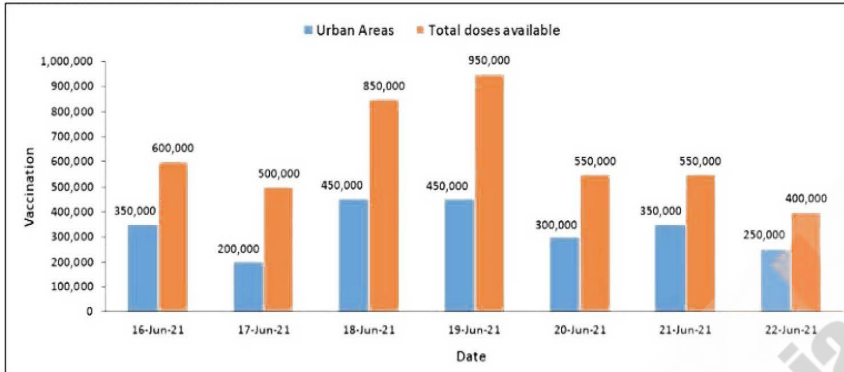
Question ID : 75322912611

Q.14 Find the largest number which can exactly divide 2048, 2052, 3526.

- Ans  A. 13  
 B. 2  
 C. 4  
 D. 26

Question ID : 75322912597

Q.15 Daily doses of COWIN administered for vaccination in a week in a state in India and total doses available that day is represented by the bar graph. It was decided to double the rate of vaccination in urban areas on 19-june & 21-june, then how many more dose are needed?



- Ans  A. 150000  
 B. 100000  
 C. 225000  
 D. 200000

Question ID : 75322912614

Q.16 The total expenditure (in Rs. Crores) of a coaching company from January to May on three of its courses X, Y, and Z is shown in the table. Calculate the total profit in the 5 months.

Month	Courses			Sales (In Rs.)
	X	Y	Z	
Jan	70	120	70	800 crores
Feb	25	95	70	950 crores
Mar	70	120	120	1000 crores
Apr	120	45	20	650 crores
May	70	120	120	1100 crores

- Ans  A. Rs 5243 Crores  
 B. Rs 4532 Crores  
 C. Rs 2345 Crores  
 D. Rs 3245 Crores

Question ID : 75322912612

Q.17 Pipe A can fill a tank in 16 hours and pipe B can fill it in 18 hours. Both the pipes are opened and after four hours, pipe A is closed. How much time will B take to fill the remaining part of the tank?

- Ans  A. 9 hrs  
 B. 10.5 hrs  
 C. 10 hrs  
 D. 9.5 hrs

Question ID : 75322912609

Q.18 By selling an article for Rs 800 more, Kavita would have made 7% profit on her sale instead of a 13% loss. What was her cost price?

- Ans  A. Rs.3900  
 B. Rs.4000  
 C. Rs.3700  
 D. Rs.3800

Question ID : 75322912603

Q.19  $\frac{3x+2y}{3x-2y} = \frac{17}{13}$  then  $9x:7y =$  \_\_\_\_\_?

- Ans  A. 7:45  
 B. 9:7  
 C. 45:7  
 D. 7:9

Question ID : 75322912604

Q.20 The surface area of a cube (in cm square) whose edge equals to 15cm is \_\_\_\_\_.

- Ans  A. 1350  
 B. 900  
 C. 225  
 D. 13.50

Question ID : 75322912610

Section : General English

Q.1 Select the word segment that substitutes (replaces) the bracketed word segment correctly and completes the sentence meaningfully. Select the option 'no correction required' if the sentence is correct as given.

(It's recommendations are based on detailed comparisons between) the public and private sectors.

- Ans
- A. It's recommendation is based on detailed comparisons between
  - B. It's recommendation is based on the detailed comparisons against
  - C. Its recommendations are based on detailed comparisons between
  - D. No correction required

Question ID : 75322912617

Q.2 Four words are given, out of which only one word is spelt correctly. Choose the correctly spelt word.

- Ans
- A. crematarium
  - B. crematorium
  - C. cremetarium
  - D. cremetorium

Question ID : 75322912625

Q.3 Four words are given, out of which only three words are spelt correctly. Choose the one spelt incorrectly.

- Ans
- A. volitle
  - B. torpor
  - C. whimsical
  - D. tortuous

Question ID : 75322912626

Q.4 Select the word that is similar in meaning (SYNONYM) to the word given below

horticulture

- Ans
- A. nascent
  - B. cultivation
  - C. litigation
  - D. omniscience

Question ID : 75322912624

Q.5 The sentence below has been divided into three parts. Select the part of the sentence that has an error. If the sentence has no error, select the option 'No Error'.

The person to who this/ letter was addressed/ died three years ago.

- Ans
- A. letter was addressed
  - B. No Error
  - C. died three years ago.
  - D. T he person to who this

Question ID : 75322912616

Q.6 Fill in the blank with the most appropriate choice

I shall try and \_\_\_\_\_ my thoughts into something readable as soon as I can think of something.

- Ans  A. coalesce  
 B. convalesce  
 C. converge  
 D. cogent

Question ID : 75322912620

Q.7 Some parts of a sentence have been jumbled up, and labelled P, Q, R and S. Select the option that gives the correct sequence in which these parts can be rearranged to form a meaningful and grammatically correct sentence.

Violent scuffles  
P. broke out  
Q. groups demonstrating  
R. for and against  
S. between rival  
independence.

- Ans  A. RSPQ  
 B. PSQR  
 C. RPSQ  
 D. RQSP

Question ID : 75322912621

Q.8 Select the most appropriate idiom of the given meaning

Someone who isn't adequate enough to compete or participate

- Ans  A. Beat a dead horse  
 B. Egg on  
 C. Can't cut the mustard  
 D. Bend over backwards

Question ID : 75322912628

Q.9 Select the word that is opposite in meaning (ANTONYM) to the word given below

lunatic

- Ans  A. maniac  
 B. sane  
 C. flake  
 D. crank

Question ID : 75322912623

Q.10 The sentence below has been divided into three parts. Select the part of the sentence that has an error. If the sentence has no error, select the option 'No Error'.

For John and I, it/ has worked best/ to read chapter books.

- Ans
- A. to read chapter books.
  - B. has worked best
  - C. No Error
  - D. For John and I, it

Question ID : 75322912615

Q.11 Select the most appropriate 'one word' for the expressions given below

A herd or flock of animals being driven in a body

- Ans
- A. Drove
  - B. Sycophant
  - C. Imprudence
  - D. Iconoclast

Question ID : 75322912629

Q.12 The question below consist of a set of labelled (P, Q, R, S) sentences. Out of four options given, select the most logical order of the sentences which form a paragraph.

An ultralight airplane is very different from a conventional airplane.

P. Accidents are rarely fatal or even serious because the ultralight lands so slowly and gently and carries very little fuel.

Q. Most ultralights are sold as kits and take about 40 hours to assemble.

R. It looks like a lawn chair with wings, weighs no more than 254 pounds, flies up to 60 miles an hour, and carries about 5 gallons of fuel.

S. Flying an ultralight airplane is so easy that a pilot with no experience can fly one.

Some models now have parachutes attached, while others have parachute packs which pilots can wear.

- Ans
- A. SPRQ
  - B. RQSP
  - C. RPSQ
  - D. PRSQ

Question ID : 75322912622

Q.13 Select the most appropriate meaning of the given idiom

Herculean task

- Ans
- A. A tedious job
  - B. To understand the details
  - C. In a safe place
  - D. Main support

Question ID : 75322912627

Q.14 Fill in the blank with the most appropriate choice

Chocolate is reported to have \_\_\_\_\_ properties, releasing similar chemicals to that of a love affair when eaten.

- Ans
- A. symposiac
  - B. aphrodisiac
  - C. amnesiac
  - D. aphasiac

Question ID : 75322912619

Q.15 Select the word segment that substitutes (replaces) the bracketed word segment correctly and completes the sentence meaningfully. Select the option 'no correction required' if the sentence is correct as given.

Einstein (was one of the world's greatest thinker).

- Ans
- A. No correction required
  - B. was one of the worlds greatest thinkers
  - C. were one of the world's greatest thinkers
  - D. was one of the world's greatest thinkers

Question ID : 75322912618

**Comprehension:**

Read the passage carefully and choose the best answer to each question out of the four alternatives.

Insects are found throughout the world except on the poles. Fossil records indicate that many species exist today in much the same form as they did 200 million years ago. Their enormous biological success is attributed to their small size, the remarkable adaptive abilities of the group as a whole and the enormous variety in body structure and way of life. The mouth parts may be adapted to chewing, sucking or lapping and the legs for running, jumping or swimming. Insects may feed on plants or prey upon other small animals or parasitize larger ones. They may be omnivorous or highly specialized in their diets. They display a remarkable variety of adaptive shapes and colours that may serve as camouflage. Some have stinging spines or hair and blistering or noxious secretions used for defence.

SubQuestion No : 16

Q.16 It is stated in the passage that insects \_\_\_\_\_.

- Ans
- A. can feed on prey smaller and larger than them.
  - B. have changed significantly in their shape and size in their journey of evolution.
  - C. all insects display similar characteristic in general.
  - D. are found throughout the surface of the Earth.

Question ID : 75322912635

**Comprehension:**

Read the passage carefully and choose the best answer to each question out of the four alternatives.

Insects are found throughout the world except on the poles. Fossil records indicate that many species exist today in much the same form as they did 200 million years ago. Their enormous biological success is attributed to their small size, the remarkable adaptive abilities of the group as a whole and the enormous variety in body structure and way of life. The mouth parts may be adapted to chewing, sucking or lapping and the legs for running, jumping or swimming. Insects may feed on plants or prey upon other small animals or parasitize larger ones. They may be omnivorous or highly specialized in their diets. They display a remarkable variety of adaptive shapes and colours that may serve as camouflage. Some have stinging spines or hair and blistering or noxious secretions used for defence.

**SubQuestion No : 17**

Q.17 Which of the following cannot be attributed the enormous biological success of insects?

- Ans
- A. Diet
  - B. Abilities
  - C. Size
  - D. Intelligence

Question ID : 75322912632

**Comprehension:**

Read the passage carefully and choose the best answer to each question out of the four alternatives.

Insects are found throughout the world except on the poles. Fossil records indicate that many species exist today in much the same form as they did 200 million years ago. Their enormous biological success is attributed to their small size, the remarkable adaptive abilities of the group as a whole and the enormous variety in body structure and way of life. The mouth parts may be adapted to chewing, sucking or lapping and the legs for running, jumping or swimming. Insects may feed on plants or prey upon other small animals or parasitize larger ones. They may be omnivorous or highly specialized in their diets. They display a remarkable variety of adaptive shapes and colours that may serve as camouflage. Some have stinging spines or hair and blistering or noxious secretions used for defence.

**SubQuestion No : 18**

Q.18 According to the passage, how long can you date back the existence of insects?

- Ans
- A. 150 million years
  - B. 300 million years
  - C. 200 million years
  - D. 250 million years

Question ID : 75322912631



**Comprehension:**

Read the passage carefully and choose the best answer to each question out of the four alternatives.

Insects are found throughout the world except on the poles. Fossil records indicate that many species exist today in much the same form as they did 200 million years ago. Their enormous biological success is attributed to their small size, the remarkable adaptive abilities of the group as a whole and the enormous variety in body structure and way of life. The mouth parts may be adapted to chewing, sucking or lapping and the legs for running, jumping or swimming. Insects may feed on plants or prey upon other small animals or parasitize larger ones. They may be omnivorous or highly specialized in their diets. They display a remarkable variety of adaptive shapes and colours that may serve as camouflage. Some have stinging spines or hair and blistering or noxious secretions used for defence.

**SubQuestion No : 19**

Q.19 Where on Earth are insects not found?

- Ans  A. Poles  
 B. Forests  
 C. Deserts  
 D. Oceans

Question ID : 75322912633

**Comprehension:**

Read the passage carefully and choose the best answer to each question out of the four alternatives.

Insects are found throughout the world except on the poles. Fossil records indicate that many species exist today in much the same form as they did 200 million years ago. Their enormous biological success is attributed to their small size, the remarkable adaptive abilities of the group as a whole and the enormous variety in body structure and way of life. The mouth parts may be adapted to chewing, sucking or lapping and the legs for running, jumping or swimming. Insects may feed on plants or prey upon other small animals or parasitize larger ones. They may be omnivorous or highly specialized in their diets. They display a remarkable variety of adaptive shapes and colours that may serve as camouflage. Some have stinging spines or hair and blistering or noxious secretions used for defence.

**SubQuestion No : 20**

Q.20 According to the passage, which of the following option is incorrect? Choose one option.

- Ans  A. Insects are highly adaptive.  
 B. Insects display a remarkable variety of adaptive shape and colours.  
 C. Insects are the oldest complex living organism found on the planet.  
 D. Insects have varied kind of a diet.

Question ID : 75322912634

Section - General Hindi

Q.1 निम्नलिखित प्रश्न में, चार विकल्पों में से, उस विकल्प का चयन करें जो दिए गए शब्द के पर्यायवाची शब्द का सही विकल्प नहीं है।  
तारा

- Ans  A. नखत  
 B. शर  
 C. तारिका  
 D. नक्षत्र

Question ID : 75322912640

Q.2 निम्नलिखित प्रश्न में, चार विकल्पों में से, उस विकल्प का चयन करें जो विलोम शब्द का सबसे अच्छा विकल्प है।

दुत्कार

- Ans  A. स्वागत  
 B. बंध  
 C. शोक  
 D. कृतघ्न

Question ID : 75322912641

Q.3 निम्नलिखित प्रश्न में, चार विकल्पों में से, उस विकल्प का चयन करें जो विराम चिह्न युक्त वाक्य का सही विकल्प हो।

- Ans  A. "साहित्य राजनीति के आगे चलने वाली मशाल है" - प्रेमचंद।  
 B. "साहित्य राजनीति के आगे चलने वाली मशाल है" प्रेमचंद  
 C. "साहित्य राजनीति के आगे चलने वाली मशाल है" - प्रेमचंद  
 D. साहित्य राजनीति के आगे चलने वाली मशाल है - प्रेमचंद

Question ID : 75322912647

Q.4 निम्नलिखित प्रश्न में, चार विकल्पों में से, उस विकल्प का चयन करें जो दिए गए शब्द के सही संधि-विच्छेद का विकल्प हो।  
परमात्मा

- Ans  A. पर + मात्मा  
 B. परम + आत्मा  
 C. परमा + तमा  
 D. पर + आत्मा

Question ID : 75322912636

Q.5 निम्नलिखित प्रश्न में, चार विकल्पों में से, उस विकल्प का चयन करें जो सही वाक्य भेद का विकल्प हो।  
जब उसके पिता की मृत्यु हो गई तब वह दिल्ली छोड़कर चला गया।

- Ans  A. मिश्र वाक्य  
 B. आज्ञावाचक वाक्य  
 C. संयुक्त वाक्य  
 D. सरल वाक्य

Question ID : 75322912646

Q.6 निम्नलिखित प्रश्न में, चार विकल्पों में से, उस विकल्प का चयन करें जो दी गई मुहावरे का सही अर्थ वाला विकल्प है।

धाक जमाना -

- Ans  A. ठोकरें खाना  
 B. विरोध करना  
 C. नष्ट करना  
 D. रोब जमाना

Question ID : 75322912650

Q.7 निम्नलिखित प्रश्न में, चार विकल्पों में से, उस विकल्प का चयन करें जो दिए गए शब्द-युग्म के सही अर्थ वाला विकल्प हो।

मरीचि-मरीची

- Ans  A. मृग-किरण  
 B. किरण-मिर्च  
 C. किरण-सूर्य  
 D. मिर्च-सूर्य

Question ID : 75322912639

Q.8 निम्नलिखित प्रश्न में, चार विकल्पों में से, उस विकल्प का चयन करें जो उपसर्ग से बने शब्द का सही विकल्प हो।

- Ans  A. पुष्पित  
 B. पंचायत  
 C. व्याधि  
 D. बलिष्ठ

Question ID : 75322912638

Q.9 निम्नलिखित प्रश्न में, चार विकल्पों में से, उस सही विकल्प का चयन करें जो वाक्यांशों के लिए एक शब्द का विकल्प हो।

तेज बुद्धि वाला

- Ans  A. विद्यार्थी  
 B. तपस्वी  
 C. कुशाग्रबुद्धि  
 D. अल्पबुद्धि

Question ID : 75322912642

Q.10 निम्नलिखित प्रश्न में, चार विकल्पों में से, उस विकल्प का चयन करें जो दिए गए शब्द के लिए सही तत्पुरुष समास के विग्रह का विकल्प हो।

राज्यभवन

- Ans  A. भवन रुपी राज्य  
 B. राज्य से भवन  
 C. राज्य पर भवन  
 D. राज्य के लिए भवन

Question ID : 75322912637

Q.11 निम्नलिखित प्रश्न में, चार विकल्पों में से, उस विकल्प का चयन करें जो दिए गए लोकोक्ति का सही अर्थ वाला विकल्प है।

कभी धी घना तो कभी मुड़ी चना -

- Ans  A. थोड़े में बहुत कुछ कहना  
 B. अधिक परिश्रम कम लाभ  
 C. एक निष्ठ होकर काम करना  
 D. परिस्थितियाँ कभी एक सी नहीं रहती

Question ID : 75322912648

Q.12 निम्नलिखित प्रश्न में, चार विकल्पों में से, उस विकल्प का चयन करें जो दिए गए वाक्य के अनुसार सर्वनाम के भेद का सही विकल्प है।  
स्वाद में कुछ कमी है।

- Ans  A. पुरुषवाचक सर्वनाम  
 B. प्रश्नवाचक सर्वनाम  
 C. संबंधवाचक सर्वनाम  
 D. अनिश्चयवाचक सर्वनाम

Question ID : 75322912645

Q.13 निम्नलिखित प्रश्न में, चार विकल्पों में से, उस विकल्प का चयन करें जो दी गई मुहावरे का सही अर्थ वाला विकल्प है।

नाम कमाना -

- Ans  A. भाग जाना  
 B. प्रसिद्ध होना  
 C. बदनामी होना  
 D. खरीदारी करना

Question ID : 75322912649

Q.14 निम्नलिखित प्रश्न में, चार विकल्पों में से, उस विकल्प का चयन करें जो दिए गए शब्द के बहुवचन रूप का सबसे अच्छा विकल्प है।  
सड़क

- Ans  A. सड़काओं  
 B. सड़कें  
 C. सड़के  
 D. सड़कों

Question ID : 75322912644

Q.15 निम्नलिखित प्रश्न में, चार विकल्पों में से, उस विकल्प का चयन करें जो दिए गए शब्द का स्त्रीलिंग रूप वाला विकल्प है।

नायक

- Ans  A. नायिका  
 B. नायिकी  
 C. नाईकी  
 D. नयिकी

Question ID : 75322912643

**Comprehension:**

नीचे दिए गये गद्यांश को ध्यानपूर्वक पढ़ें और चार विकल्पों में से प्रत्येक प्रश्न का सर्वोत्तम उत्तर चुनें।

महिलाओं को शिक्षा के क्षेत्र के समान चिकित्सा के क्षेत्र में भी आना चाहिए। महिलाएं शरीर और स्वभाव दोनों ही रूप से इस कार्य के लिए उपयुक्त होती हैं। हमारे देश में कई जगह महिलाएं अक्सर बीमार और कमजोर रहती हैं। उनके बच्चे भी कुपोषण के कारण अकाल मृत्यु के ग्रास बन जाते हैं। महिलाओं की इस तरह की समस्याओं का समाधान महिलाएं ही भली भांति कर सकती हैं। कुछ महिलाएं इस व्यवसाय को अपनाना तो चाहती हैं, पर उनके पति इस व्यवसाय को अपनी प्रतिष्ठा के अनुकूल नहीं मानते। इस तरह विवश होकर महिलाओं को चिकित्सा के व्यवसाय से विमुख होना पड़ता है। पतियों को समाज हित में अपने निरर्थक अहंकार की भावना का त्याग कर अपनी पत्नियों को चिकित्सा के क्षेत्र में जाने के लिए प्रेरित करना चाहिए। यदि पुरुष ऐसा कर सके तो समाज और परिवार दोनों का ही कल्याण होगा।

**SubQuestion No : 16**

Q.16 लेखक के अनुसार वर्तमान में महिलाएं किस क्षेत्र में अधिक कार्यरत हैं?

- Ans  A. शिक्षक के रूप में  
 B. अस्वस्थ के तौर पर  
 C. कमजोरी के क्षेत्र में  
 D. चिकित्सा के क्षेत्र में

Question ID : 75322912652

**Comprehension:**

नीचे दिए गये गद्यांश को ध्यानपूर्वक पढ़ें और चार विकल्पों में से प्रत्येक प्रश्न का सर्वोत्तम उत्तर चुनें।

महिलाओं को शिक्षा के क्षेत्र के समान चिकित्सा के क्षेत्र में भी आना चाहिए। महिलाएं शरीर और स्वभाव दोनों ही रूप से इस कार्य के लिए उपयुक्त होती हैं। हमारे देश में कई जगह महिलाएं अक्सर बीमार और कमजोर रहती हैं। उनके बच्चे भी कुपोषण के कारण अकाल मृत्यु के ग्रास बन जाते हैं। महिलाओं की इस तरह की समस्याओं का समाधान महिलाएं ही भली भांति कर सकती हैं। कुछ महिलाएं इस व्यवसाय को अपनाना तो चाहती हैं, पर उनके पति इस व्यवसाय को अपनी प्रतिष्ठा के अनुकूल नहीं मानते। इस तरह विवश होकर महिलाओं को चिकित्सा के व्यवसाय से विमुख होना पड़ता है। पतियों को समाज हित में अपने निरर्थक अहंकार की भावना का त्याग कर अपनी पत्नियों को चिकित्सा के क्षेत्र में जाने के लिए प्रेरित करना चाहिए। यदि पुरुष ऐसा कर सके तो समाज और परिवार दोनों का ही कल्याण होगा।

**SubQuestion No : 17**

Q.17 इस अनुच्छेद का कोई उपयुक्त शीर्षक-

- Ans  A. समाज हित  
 B. पुरुषों की स्वीकृति  
 C. अप्रतिष्ठित व्यवसाय  
 D. चिकित्सा के क्षेत्र में महिलाओं की आवश्यकता

Question ID : 75322912656

**Comprehension:**

नीचे दिए गये गद्यांश को ध्यानपूर्वक पढ़ें और चार विकल्पों में से प्रत्येक प्रश्न का सर्वोत्तम उत्तर चुनें।

महिलाओं को शिक्षा के क्षेत्र के समान चिकित्सा के क्षेत्र में भी आना चाहिए। महिलाएं शरीर और स्वभाव दोनों ही रूप से इस कार्य के लिए उपयुक्त होती हैं। हमारे देश में कई जगह महिलाएं अक्सर बीमार और कमजोर रहती हैं। उनके बच्चे भी कुपोषण के कारण अकाल मृत्यु के ग्रास बन जाते हैं। महिलाओं की इस तरह की समस्याओं का समाधान महिलाएं ही भली भांति कर सकती हैं। कुछ महिलाएं इस व्यवसाय को अपनाना तो चाहती हैं, पर उनके पति इस व्यवसाय को अपनी प्रतिष्ठा के अनुकूल नहीं मानते। इस तरह विवश होकर महिलाओं को चिकित्सा के व्यवसाय से विमुख होना पड़ता है। पतियों को समाज हित में अपने निरर्थक अहंकार की भावना का त्याग कर अपनी पत्नियों को चिकित्सा के क्षेत्र में जाने के लिए प्रेरित करना चाहिए। यदि पुरुष ऐसा कर सके तो समाज और परिवार दोनों का ही कल्याण होगा।

**SubQuestion No : 18**

Q.18 महिलाओं को चिकित्सा के क्षेत्र में क्यों आगे आना चाहिए?

- Ans  A. क्योंकि यह क्षेत्र सिर्फ महिलाओं के लिए है
- B. क्योंकि वह शरीर और स्वभाव दोनों से ही इसके अनुकूल है
- C. क्योंकि वह शरीर और स्वभाव दोनों से ही इसके प्रतिकूल हैं
- D. क्योंकि इस क्षेत्र में आने के लिए उनके पास बहुत समय है

Question ID : 75322912653

**Comprehension:**

नीचे दिए गये गद्यांश को ध्यानपूर्वक पढ़ें और चार विकल्पों में से प्रत्येक प्रश्न का सर्वोत्तम उत्तर चुनें।

महिलाओं को शिक्षा के क्षेत्र के समान चिकित्सा के क्षेत्र में भी आना चाहिए। महिलाएं शरीर और स्वभाव दोनों ही रूप से इस कार्य के लिए उपयुक्त होती हैं। हमारे देश में कई जगह महिलाएं अक्सर बीमार और कमजोर रहती हैं। उनके बच्चे भी कुपोषण के कारण अकाल मृत्यु के ग्रास बन जाते हैं। महिलाओं की इस तरह की समस्याओं का समाधान महिलाएं ही भली भांति कर सकती हैं। कुछ महिलाएं इस व्यवसाय को अपनाना तो चाहती हैं, पर उनके पति इस व्यवसाय को अपनी प्रतिष्ठा के अनुकूल नहीं मानते। इस तरह विवश होकर महिलाओं को चिकित्सा के व्यवसाय से विमुख होना पड़ता है। पतियों को समाज हित में अपने निरर्थक अहंकार की भावना का त्याग कर अपनी पत्नियों को चिकित्सा के क्षेत्र में जाने के लिए प्रेरित करना चाहिए। यदि पुरुष ऐसा कर सके तो समाज और परिवार दोनों का ही कल्याण होगा।

**SubQuestion No : 19**

Q.19 इनमें से कौन-सा विमुख का विलोम शब्द है?

- Ans  A. सन्मुख
- B. एकाग्र
- C. दो मुख
- D. ओर

Question ID : 75322912655

**Comprehension:**

नीचे दिए गये गद्यांश को ध्यानपूर्वक पढ़ें और चार विकल्पों में से प्रत्येक प्रश्न का सर्वोत्तम उत्तर चुनें।

महिलाओं को शिक्षा के क्षेत्र के समान चिकित्सा के क्षेत्र में भी आना चाहिए। महिलाएं शरीर और स्वभाव दोनों ही रूप से इस कार्य के लिए उपयुक्त होती हैं। हमारे देश में कई जगह महिलाएं अक्सर बीमार और कमजोर रहती हैं। उनके बच्चे भी कुपोषण के कारण अकाल मृत्यु के ग्रास बन जाते हैं। महिलाओं की इस तरह की समस्याओं का समाधान महिलाएं ही भली भांति कर सकती हैं। कुछ महिलाएं इस व्यवसाय को अपनाना तो चाहती हैं, पर उनके पति इस व्यवसाय को अपनी प्रतिष्ठा के अनुकूल नहीं मानते। इस तरह विवश होकर महिलाओं को चिकित्सा के व्यवसाय से विमुख होना पड़ता है। पतियों को समाज हित में अपने निरर्थक अहंकार की भावना का त्याग कर अपनी पत्नियों को चिकित्सा के क्षेत्र में जाने के लिए प्रेरित करना चाहिए। यदि पुरुष ऐसा कर सके तो समाज और परिवार दोनों का ही कल्याण होगा।

**SubQuestion No : 20**

Q.20 समाज हित में भारतीय पतियों से क्या अपेक्षा की गई है?

- Ans
- A. कि वे पत्नियों के साथ चिकित्सा के क्षेत्र में आ जाएं
  - B. कि वे पत्नियों को वहीं करने दे जो वे स्वयं चाहते हैं
  - C. कि वे पत्नियों को चिकित्सा के क्षेत्र में जाने के लिए प्रेरित करें
  - D. कि वे पत्नियों को चिकित्सा के क्षेत्र में जाने के लिए मना करें

Question ID : 75322912654

**Section : Discipline 1**

Q.1 A child belonging to Gond tribe came into the city with his family. He was admitted to a public school nearby. Even after months, he was not able to make friends or become a part of any group. The teacher used to ignore his interests following which he lost his self confidence. Which feature of socio culture is being highlighted in the above situation?

- Ans
- A. stereotype
  - B. marginalisation
  - C. urbanisation
  - D. feminism

Question ID : 75322912673

Q.2 According to Piaget, at which stage the children learn about their environment through their senses?

- Ans
- A. formal operational stage ( 12 years onwards)
  - B. pre operational stage ( 2-7 years)
  - C. Concrete operational stage (7 to 12 years)
  - D. sensori motor stage ( birth-2 years)

Question ID : 75322912662

Q.3 The student behaves aggressively in the classroom, he needs help in:

- Ans
- A. cognitive domain of learning
  - B. affective domain of learning
  - C. psycho motor domain of learning
  - D. High order thinking skills

Question ID : 75322912666

Q.4 Which psychologist talked about Latency period in theory of sexual development?

- Ans  A. Freud  
 B. Erikson  
 C. Vygotsky  
 D. Piaget

Question ID : 75322912658

Q.5 At which stage of child development, does the child become unrealistic?

- Ans  A. Adulthood  
 B. Adolescence  
 C. Childhood  
 D. Infant

Question ID : 75322912663

Q.6 In the revised version of Bloom's Taxonomy in 2001, the noun 'synthesis' was changed to which of the following verb?

- Ans  A. defining  
 B. combining  
 C. creating  
 D. blending

Question ID : 75322912670

Q.7 There has been various policies framed in NEP 1986,1992,2005 and 2020. All of these policies made by education ministries and other officials are best categorised under which dimension of socio cultural environment?

- Ans  A. social  
 B. technological  
 C. economic  
 D. political

Question ID : 75322912675

Q.8 A child has a schema for dog based on his experience with his own pet, then he sees another dog in the garden, he is able to recognize the animal. Which process of cognitive development is highlighted in the statement?

- Ans  A. Accommodation  
 B. Equilibrium  
 C. Operations  
 D. Assimilation

Question ID : 75322912669



Q.9 During the pandemic, it has been an easy journey for the students of private schools to continue their studies whereas it has been a tough journey for the students of government school. Which feature of socio culture is being highlighted in the above situation?

- Ans
- A. political factors
  - B. physical factors
  - C. cultural diffusion
  - D. technological factors

Question ID : 75322912674

Q.10 At which stage of child development does the child develops ideas of honesty, empathy,etc.

- Ans
- A. Infant
  - B. Adolescence
  - C. Childhood
  - D. Adulthood

Question ID : 75322912660

Q.11 At which stage of child development, does the child feel that every body is looking at them and they become conscious?

- Ans
- A. Infant
  - B. Adolescence
  - C. Childhood
  - D. Adulthood

Question ID : 75322912664

Q.12 In which stage of child development children enjoy fantasy stories like fairy tales the most?

- Ans
- A. Adolescence
  - B. Adulthood
  - C. Infant
  - D. Newborn

Question ID : 75322912657

Q.13 Which domain is also called as conative domain of learning?

- Ans
- A. High order thinking skills
  - B. Cognitive
  - C. Psycho-motor
  - D. Affective

Question ID : 75322912667

Q.14 Which of the following is not a domain of learning?

- Ans  A. Spiritual  
 B. psycho motor  
 C. affective  
 D. cognitive

Question ID : 75322912665

Q.15 Which of the following is not a factor of socio culture impact on the development of a child?

- Ans  A. urbanisation  
 B. religious centres  
 C. nuclear families  
 D. examinations

Question ID : 75322912671

Q.16 Which stage of child development refers to the period of 'stress and storm'?

- Ans  A. Adolescence  
 B. Childhood  
 C. Infant  
 D. Adulthood

Question ID : 75322912661

Q.17 Which psychologist talked about private speech for self regulation?

- Ans  A. Rousseau  
 B. Vygotsky  
 C. Piaget  
 D. Kohlberg

Question ID : 75322912676

Q.18 Father of Ram and Sita, got toys for them. By default he gifted the boy an aeroplane. Which feature of social culture is highlighted in the statement?

- Ans  A. equality  
 B. stereotype  
 C. marginalisation  
 D. feminism

Question ID : 75322912672

Q.19 Which stage of child development refers to the period of Gang Age?

- Ans  A. Adolescence  
 B. Adulthood  
 C. Childhood  
 D. Infant

Question ID : 75322912659

Q.20 Which action verb is used for evaluation in cognitive domain?

- Ans  A. Define  
 B. recognize  
 C. discover  
 D. criticize

Question ID : 75322912668

Section : Discipline2

Q.1 Which amendment of constitution of India made the Right to Education a Fundamental Right?

- Ans  A. 86  
 B. 79  
 C. 41  
 D. 75

Question ID : 75322912683

Q.2 A teacher can respond to the interests of children with special needs by:

- Ans  A. asking the other students to address them as disadvantaged and express sympathy  
 B. being aware about the individual differences of students and create individualised learning material  
 C. ignoring the individual differences  
 D. making them sit separately in the classroom so that they do not mix with other children

Question ID : 75322912688

Q.3 Which of the following is referred as Magna-Carta' of English Education in India?

- Ans  A. Wood's despatch  
 B. national policy of education 1986  
 C. Kothari commission  
 D. Right to education act, 2009

Question ID : 75322912681

Q.4 Every child of the age of six to fourteen years, shall have the right to free and compulsory education in a neighbourhood school till the completion of his or her elementary education. Which act provides the above recommendation?

- Ans
- A. national policy of education 1986
  - B. Rashtriya madhyamik shiksha abhiyaan
  - C. Kothari commission
  - D. Right to education act, 2009

Question ID : 75322912680

Q.5 In instructional scheme of any subject, planning the lesson as per the time table, using the transactional strategies and using the appropriate media refer to:

- Ans
- A. facets of curriculum
  - B. meaning of curriculum
  - C. implementation of curriculum
  - D. advantages of curriculum

Question ID : 75322912695

Q.6 National education commission ( 1964-1966) is popularly known as?

- Ans
- A. University education commission
  - B. Secondary education commission
  - C. National knowledge commission
  - D. Kothari commission

Question ID : 75322912679

Q.7 Which of the following is not a learning disability?

- Ans
- A. Visual impairment
  - B. Dyscalculia
  - C. dysgraphia
  - D. Dyslexia

Question ID : 75322912687

Q.8 The sum total of all the activities, academic and non-academic which have an impact on student's learning is called as

- Ans
- A. syllabus
  - B. curriculum
  - C. Curricular activates
  - D. modules

Question ID : 75322912691

Q.9 Zone of proximal distance and scaffolding are some of the key process of child development. Who gave these terms?

- Ans  A. Vygotsky  
 B. Rousseau  
 C. Kohlberg  
 D. Piaget

Question ID : 75322912678

Q.10 Which of the following is not a facet of curriculum?

- Ans  A. Design  
 B. goals and purpose of education  
 C. Designing co-curricular activities  
 D. Outcomes

Question ID : 75322912694

Q.11 Tina grasps the concepts of addition in the school, while going back home she buys some refreshments and calculates the expenses herself. Which component of curriculum is highlighted in the above statement?

- Ans  A. Values  
 B. Content  
 C. Concept  
 D. Application

Question ID : 75322912692

Q.12 Which ministry anchors the Sarv Shiksha Abhiyaan?

- Ans  A. Ministry of Co-operation  
 B. Ministry of commerce and industry  
 C. Ministry of human resource development  
 D. Ministry of women and child development

Question ID : 75322912684

Q.13 Which university was set up following Wood's Despatch?

- Ans  A. Calcutta  
 B. Bihar  
 C. Delhi  
 D. Lucknow

Question ID : 75322912682

Q.14 Which of the following is not a feature of curriculum?

- Ans  A. Curriculum as means  
 B. curriculum as end  
 C. curriculum as experience  
 D. curriculum includes all activities

Question ID : 75322912693

Q.15 Which of the following is not an important concepts of Vygotsky's theory?

- Ans  A. culture  
 B. language  
 C. social interaction  
 D. assessments

Question ID : 75322912677

Q.16 The women being considered as weak and vulnerable, needing protection and not being able to survive alone refers to:

- Ans  A. equity  
 B. stereotype  
 C. inequality  
 D. Gender bias

Question ID : 75322912685

Q.17 Which of the following is not a determinant of curriculum?

- Ans  A. individual talents  
 B. social aspect  
 C. gender roles  
 D. basic needs

Question ID : 75322912696

Q.18 There are mother centred societies where the elder female of the family is the leader . The power of property passes from the mother to the daughter. Which society is being referred?

- Ans  A. Misogyny  
 B. patriarchy  
 C. matriarchy  
 D. monogamy

Question ID : 75322912686

Q.19 If a child is suffering from dyslexia, the teacher must adopt the following remedial strategy:

- Ans
- A. Continue the teaching learning process without any modification
  - B. providing counting material such as abacus, rulers, etc.
  - C. Help develop his listening skills ,while tracking the words from the audio book / recorded study material/s provided
  - D. performing gross bodily exercises showing directions such as left and right

Question ID : 75322912690

Q.20 What do you mean by dysgraphia?

- Ans
- A. Attention disorder
  - B. difficulty in reading
  - C. Unable to perform number based operations
  - D. difficulties with spelling and/or trouble putting thoughts on paper

Question ID : 75322912689

Section : Discipline3

Q.1 What refers to the subconscious process of 'picking up' a language through exposure?

- Ans
- A. listening
  - B. speaking
  - C. acquisition
  - D. learning

Question ID : 75322912711

Q.2 A child is able to acquire his mother tongue by?

- Ans
- A. informal way
  - B. schooling
  - C. rules
  - D. formal way

Question ID : 75322912705

Q.3 Assessments like Unit tests and class tests fall under:

- Ans
- A. portfolio assessment
  - B. formative assessment
  - C. summative assessment
  - D. CCE

Question ID : 75322912715

Q.4 Which of the following is least related to objective based planning, teaching and assessment?

- Ans
- A. clear curriculum definition
  - B. assured assessment validity
  - C. ease of teacher workload
  - D. clear administrative policies

Question ID : 75322912703

Q.5 Which stage in child development refers to the holophrastic age?

- Ans
- A. combining words stage
  - B. sentence making stage
  - C. two word stage
  - D. one word stage

Question ID : 75322912710

Q.6 The teacher delivered her lesson plan in the classroom and uploaded the study material on Google drive. She gave the access of the link to all the students for their ease. Which type of ICT source did she use?

- Ans
- A. Blended learning
  - B. Traditional method
  - C. Cloud computing
  - D. Social media

Question ID : 75322912698

Q.7 At what age does the child start babbling?

- Ans
- A. 6 months
  - B. 1 year
  - C. 1 month
  - D. 6-12 months

Question ID : 75322912713

Q.8 At what age does the child develop his fluent speech with no errors?

- Ans
- A. 12 years plus
  - B. 14 years plus
  - C. 11 years
  - D. 8-12 years

Question ID : 75322912712



Q.9 If the test results are consistent it will be termed as?

- Ans  A. reliable test  
 B. subjective test  
 C. objective test  
 D. valid test

Question ID : 75322912704

Q.10 The students belonging to low income families are not able to cope up with the studies during the pandemic as they do not have the online resources available. Which disadvantage of ICT has been highlighted in the above statement?

- Ans  A. Expensive  
 B. untrained teachers  
 C. addictive and time waster  
 D. rigid nature

Question ID : 75322912700

Q.11 Vernacular language refers to:

- Ans  A. second language  
 B. Hindi  
 C. first language  
 D. Dialects

Question ID : 75322912706

Q.12 Artwork, lab reports or reading logs are examples of which type of assessment?

- Ans  A. portfolio assessment  
 B. formative assessment  
 C. CCE  
 D. summative assessment

Question ID : 75322912716

Q.13 First language acquisition does not involve the following step.

- Ans  A. telegraphic speech  
 B. word coinage  
 C. cooing  
 D. babbling

Question ID : 75322912707

Q.14 The development of second language skills must be in?

- Ans  A. sequential manner  
 B. integrated manner  
 C. in isolation  
 D. sequential order and in an integrated manner

Question ID : 75322912709

Q.15 Which of the following satellite is dedicated exclusively for educational services?

- Ans  A. EOS  
 B. EDUSAT  
 C. EMISAT  
 D. GSAT

Question ID : 75322912702

Q.16 What is the time duration of micro teaching cycle?

- Ans  A. 35 minutes  
 B. 40 minutes  
 C. 36 minutes  
 D. 30 minutes

Question ID : 75322912714

Q.17 The teacher provides study material a day before teaching the same, the students go through it according to their own pace and use the time in class to complete assignments with teacher's assistance. What kind of learning is highlighted in the statement?

- Ans  A. Distance learning  
 B. Traditional learning  
 C. Flipped learning  
 D. Blended learning

Question ID : 75322912699

Q.18 What is the correct sequence of acquiring a language?

- Ans  A. writing, speaking, reading, listening  
 B. Listening, reading, writing, speaking  
 C. speaking, listening, reading, writing  
 D. Listening, speaking, reading, writing

Question ID : 75322912708

Q.19 Which of the following is NOT an ICT tool?

- Ans  A. Over head projector  
 B. Social media  
 C. Newspaper  
 D. Television

Question ID : 75322912701

Q.20 Which of the following is not an advantage of ICT in education?

- Ans  A. Time effective  
 B. promotes traditional learning  
 C. bridges the communication gap  
 D. access to more information

Question ID : 75322912697

Section : Discipline4

Q.1 Providing recess in schools will help the students to:

- Ans  A. complete their homework  
 B. develop social skills  
 C. isolate themselves  
 D. intra personal skills

Question ID : 75322912735

Q.2 Which of the following is a part of performing arts?

- Ans  A. music  
 B. Painting  
 C. photography  
 D. sculpture

Question ID : 75322912727

Q.3 The main aim of teaching social sciences is:

- Ans  A. rote learning  
 B. To critically analyse our environment and prepare ourselves to deal with the real life situations  
 C. in order to write the examinations  
 D. to understand the historical events only

Question ID : 75322912724

Q.4 The ability of teachers to communicate the tasks, roles, goals, and dynamics of a particular game scenario as seen from a player perspective is called as?

- Ans
- A. instructor
  - B. guide
  - C. playmaker
  - D. evaluator

Question ID : 75322912733

Q.5 NCF 2005 recommends that:

- Ans
- A. The children must learn the content and do good in examinations
  - B. The students must carry all the books to school
  - C. children must be able to relate the subject to real life
  - D. the student must focus only on academics

Question ID : 75322912722

Q.6 The child looks around into his environment in a/an:

- Ans
- A. systematic way
  - B. classifying into science and society
  - C. isolated manner
  - D. holistic manner

Question ID : 75322912723

Q.7 Which of the following is not an example of inter-personal skills?

- Ans
- A. teamwork
  - B. active listening
  - C. leadership
  - D. apathy

Question ID : 75322912734

Q.8 Which of the following is not a theme of EVS?

- Ans
- A. family and friends
  - B. Culture
  - C. travel
  - D. shelter

Question ID : 75322912721

Q.9 Game-Based Teaching as a dynamic interplay of four knowledge practices, which of the following is not a part of it?

- Ans  A. propositional knowledge  
 B. curricular knowledge practices  
 C. scenario based knowledge practices  
 D. everyday knowledge practices

Question ID : 75322912732

Q.10 Which of the following is not a tool to develop social skills in students?

- Ans  A. street play  
 B. examination  
 C. football  
 D. debate

Question ID : 75322912736

Q.11 Tom is asked by his mother to go to the vegetable shop and buy 1 kg potatoes and 2 kg tomatoes. He calculates the total amount and give it to the vendor. Which feature of mathematics has been highlighted in the above statement?

- Ans  A. pure mathematics  
 B. mathematics is an art  
 C. rote learning  
 D. applied mathematics

Question ID : 75322912720

Q.12 Which of the following is the reason to find mathematics difficult?

- Ans  A. gender differences  
 B. parental interference  
 C. structure of mathematics  
 D. inequality

Question ID : 75322912719

Q.13 Which branch of philosophy deals with nature, expression and perception of beauty?

- Ans  A. Epistemology  
 B. Logic  
 C. Aesthetics  
 D. meta-physics

Question ID : 75322912728

Q.14 Social science encompasses diverse concerns of society, including:

- Ans  A. political and economic dimension  
 B. historical, political, geographical, economic dimension  
 C. economic dimension  
 D. historical and geographical dimensions

Question ID : 75322912725

Q.15 A teacher took the students in the school playground and asked them to count various types of flowers they see and classify them. The teacher is trying to:

- Ans  A. help students make connections with mathematics and their real life  
 B. make the class joyful  
 C. teach them through project approach  
 D. enhance the reasoning power of students

Question ID : 75322912718

Q.16 Which role of a teacher concerns planning and communication of the overall goals of a game scenario in relation to particular learning objective ?

- Ans  A. guide  
 B. evaluator  
 C. instructor  
 D. playmaker

Question ID : 75322912730

Q.17 The teacher asks the students to prepare a role play on 'The Dandi March' bilingually. Which educational importance of art has been mentioned in the statement?

- Ans  A. dancing skills  
 B. rote learning skills  
 C. painting skills  
 D. Language skills

Question ID : 75322912729

Q.18 A teacher wants to assign the project on 'Revolt of 1857', based on primary sources. Which of the following is not a primary source?

- Ans  A. oral history  
 B. Newspaper archives  
 C. Autobiographies  
 D. novels

Question ID : 75322912726

Q.19 Which of the following sequence is correct for Diagnostic test?

- Ans  A. Find out the mistakes of students in previous paper, make a test, administration of a test, locate the errors, find the causes of problems.
- B. Find out the mistakes of students in previous paper, make a test, administration of a test, locate the errors
- C. Prepare a plan, prepare a test, administer the test, locate the errors.
- D. Prepare a plan, prepare a test, administer the test, locate the errors, repeat the test.

Question ID : 75322912717

Q.20 In a pragmatic pedagogical approach, the teacher should make use of which type of game?

- Ans  A. self expression
- B. enquiry
- C. training and revision
- D. Simulation

Question ID : 75322912731

Section : Discipline5

Q.1 Sports day is celebrated in schools in order to promote

- Ans  A. social education
- B. yoga education
- C. moral education
- D. physical education

Question ID : 75322912742

Q.2 Which of the following is not a member of School Management Committee?

- Ans  A. Principal
- B. Parents
- C. Students
- D. Government official

Question ID : 75322912755

Q.3 To be aware of one's own inner processes i.e. thoughts , feelings, likes , dislikes etc is known as :

- Ans  A. Self esteem
- B. self awareness
- C. metaphysics
- D. inter personal skills

Question ID : 75322912738

Q.4 Which of the following is the primary source of interaction for the child?

- Ans  A. teachers  
 B. neighbourhood  
 C. family  
 D. friends

Question ID : 75322912739

Q.5 Which of the following is not a part of the content of Work Education?

- Ans  A. community out reach activities  
 B. memorizing skills  
 C. self help activities  
 D. pre-vocational skills development activities

Question ID : 75322912748

Q.6 Bandura did an experiment to check whether the social behaviour can be acquired or not. On which object did he conduct his experiment?

- Ans  A. bobo doll  
 B. dog  
 C. cat  
 D. sultan

Question ID : 75322912740

Q.7 The need of physical health is important in children for

- Ans  A. mental development  
 B. holistic development  
 C. social development  
 D. emotional development

Question ID : 75322912741

Q.8 Which term refers to a person's overall sense of his or her value or worth?

- Ans  A. personality  
 B. self actualisation  
 C. self esteem  
 D. ego

Question ID : 75322912753

Q.9 Which of the following is a horticulture skill?

- Ans  A. Mushroom cultivation for consumption, preservation or sale  
 B. Silk worm rearing for sale or yarn-making  
 C. Milking of dairy animals and managing allied activities  
 D. Fish rearing in small ponds.

Question ID : 75322912750



Q.10 Which one of the factors does not influence the health of an individual?

- Ans  A. environmental  
 B. personal  
 C. biological  
 D. economic

Question ID : 75322912746

Q.11 Which of the following is not related to health education?

- Ans  A. chronic disease awareness  
 B. maternal and infant health  
 C. promotion of drug use  
 D. mental and behavioural health

Question ID : 75322912745

Q.12 If the students are unable to answer the teacher at the time of formative assessments, then

- Ans  A. the teacher must not worry about the individual interests of the child  
 B. the teacher must promote rote learning  
 C. the teacher must self reflect upon her teaching  
 D. the teacher must use corporal punishment

Question ID : 75322912752

Q.13 Which of the following is not an important function of SMC?

- Ans  A. Monitoring the working of the school  
 B. Preparing school development plan  
 C. Conducting student teacher meet every month  
 D. Monitoring the utilization of grants received from govt. or local authority

Question ID : 75322912756

Q.14 A teacher gives a lecture on an Annual day, she is able to clearly state her message and interacts with the audience. She respects the audience and is able to understand their point of view. Which type of skills are being highlighted here?

- Ans  A. Intra personal skills  
 B. Social skills  
 C. communication skills  
 D. affective skills

Question ID : 75322912754

Q.15 Which of the following is not a part of community outreach activity?

- Ans  A. Activities related to sensitization towards weaker sections of society.  
 B. Preparation of family budget  
 C. Studying the nutrition and health status of people in a village/city/slum/tribal area  
 D. Volunteer work in hospitals and fairs, during natural disasters

Question ID : 75322912749

Q.16 Parents of Ram are explaining him the effects of drinking, smoking and drugs. Which type of education are they delivering to the child?

- Ans  A. sex education  
 B. fitness education  
 C. health education  
 D. mental education

Question ID : 75322912744

Q.17 Which of the following is not an objective of physical education?

- Ans  A. social adaptability  
 B. mental balance  
 C. Curricular activities achievement  
 D. emotional adjustment

Question ID : 75322912743

Q.18 There are 9 core areas in work education, which of the following is not a part of it?

- Ans  A. health education  
 B. obesity removal  
 C. information technology  
 D. nutrition education

Question ID : 75322912751

Q.19 Physical activities, as an inherent part of the educational process, help develop coordination between hand and head alongside self reliance that best represent:

- Ans  A. value education  
 B. physical education  
 C. art education  
 D. work education

Question ID : 75322912747

Q.20 The communication is said to be complete after

- Ans
- A. decoding the message
  - B. sending the message
  - C. feedback
  - D. coding the message

Question ID : 75322912737



Teachingninja.in