



# Teachingninja.in



**Latest Govt Job updates**



**Private Job updates**



**Free Mock tests available**



**Visit - [teachingninja.in](https://teachingninja.in)**

# DDA ASO

**Previous Year Paper**  
**06 Oct, 2023 Shift 4**





**DELHI DEVELOPMENT AUTHORITY**  
**RECRUITMENT CELL**  
**VIKAS SADAN, INA, NEW DELHI - 110023**  
(<https://www.dda.gov.in>)


**Advertisement No. 02/2023/Recrtt. Cell/Pers./DDA**

Test Date	06/10/2023
Test Time	5:30 PM - 6:30 PM
Subject	Assistant Section Officer (ASO)

Section : General Intelligence and Reasoning

**Q.1** The given figure consists of a series with a question mark. Find out the alternative for the question mark that completes the series from the given options.

Question figure:



Ans

✗ 1.



✗ 2.



✗ 3.



✓ 4.



Question ID : 630680384841

Option 1 ID : 6306801500253

Option 2 ID : 6306801500252

Option 3 ID : 6306801500250

Option 4 ID : 6306801500251

Status : Answered

Chosen Option : 4

**Q.2** Select the option that is related to the fifth word in the same way as the fourth word is related to the third word and the second word is related to the first word.

VIRTUOUS : SINFUL :: ACTIVE : IDLE :: KEEP : ?

Ans

✗ 1. REMAIN

✗ 2. SUPPORT

✓ 3. ABANDON

✗ 4. STAY

Question ID : 630680384495

Option 1 ID : 6306801498869

Option 2 ID : 6306801498868

Option 3 ID : 6306801498866

Option 4 ID : 6306801498867

Status : Answered

Chosen Option : 3

**Q.3** Which of the following letter-number cluster will replace the question mark (?) in the given series?  
AEI9, EIM13, IMQ17, MQU21, QUY25, UYC3, ?

- Ans**
- ✓ 1. YCG7
  - ✗ 2. YCG11
  - ✗ 3. YCF7
  - ✗ 4. YCC9

Question ID : 630680384723  
Option 1 ID : 6306801499779  
Option 2 ID : 6306801499780  
Option 3 ID : 6306801499781  
Option 4 ID : 6306801499778  
Status : Answered  
Chosen Option : 1

**Q.4** Three Statements are given followed by two conclusions numbered I and II. Assuming the statements to be true, even if they seem to be at variance with commonly known facts, decide which of the conclusions logically follow(s) from the statements.

Statement:  
Statement I: Some cis are trans.  
Statement II: Some trans are phi.  
Statement III: Some phi are chi.  
Conclusion:  
Conclusion I: Some cis are chi.  
Conclusion II: Some chi are trans.

- Ans**
- ✗ 1. Only conclusion I follows
  - ✗ 2. Both conclusions I and II follow
  - ✗ 3. Only conclusion II follows
  - ✓ 4. Neither conclusion I nor II follows

Question ID : 630680384727  
Option 1 ID : 6306801499794  
Option 2 ID : 6306801499796  
Option 3 ID : 6306801499795  
Option 4 ID : 6306801499797  
Status : Answered  
Chosen Option : 4

**Q.5** Find out the wrong term in the given series.

GI, HH, IJ, JF, KE, LD

- Ans**
- ✗ 1. JF
  - ✗ 2. HH
  - ✓ 3. IJ
  - ✗ 4. LD

Question ID : 630680384522  
Option 1 ID : 6306801498975  
Option 2 ID : 6306801498974  
Option 3 ID : 6306801498976  
Option 4 ID : 6306801498977  
Status : Answered  
Chosen Option : 3

**Q.6** How many letters are there in the given series that are immediately preceded by a number and immediately followed by a vowel?  
A 5 B H 2 D 3 6 K S 2 1 G 9 5 M 3 Q 4 E U 6 3 F I

- Ans**
- ☒ 1. 3
  - ☒ 2. 2
  - ☒ 3. 4
  - ☒ 4. 1

Question ID : 630680384459  
Option 1 ID : 6306801498724  
Option 2 ID : 6306801498725  
Option 3 ID : 6306801498722  
Option 4 ID : 6306801498723  
Status : Answered  
Chosen Option : 2

**Q.7** How many letters are there in the given series that are immediately preceded as well as followed by a symbol?  
S S P R @ L ! M B # A @ Q + T

- Ans**
- ☒ 1. 1
  - ☒ 2. 3
  - ☒ 3. 4
  - ☒ 4. 2

Question ID : 630680384554  
Option 1 ID : 6306801499102  
Option 2 ID : 6306801499103  
Option 3 ID : 6306801499104  
Option 4 ID : 6306801499105  
Status : Answered  
Chosen Option : 2

**Q.8** Five people X, Y, Z, W, and A are sitting on a bench facing north. Z sits immediately between A and Y. Only one person sits to the right of Y. A is not an immediate neighbour of X. Who sits to the immediate right of W?

- Ans**
- ☒ 1. X
  - ☒ 2. A
  - ☒ 3. Z
  - ☒ 4. Y

Question ID : 630680384716  
Option 1 ID : 6306801499750  
Option 2 ID : 6306801499751  
Option 3 ID : 6306801499753  
Option 4 ID : 6306801499752  
Status : Answered  
Chosen Option : 2

**Q.9** Three Statements are given followed by three conclusions numbered I, II, and III. Assuming the statements to be true, even if they seem to be at variance with commonly known facts, decide which of the conclusions logically follow(s) from the statements.

Statement:

Statement I: All radios are mobiles.

Statement II: All mobiles are tape recorders.

Statement III: All tape recorders are walkman.

Conclusion:

Conclusion I: All radios are walkman.

Conclusion II: All tape recorders are radios.

Conclusion III: Some walkman are mobiles.

**Ans** ☒ 1. None of the conclusions follow

☒ 2. Only II follows

☒ 3. Only I and II follows

☒ 4. Only I and III follows

Question ID : 630680384532

Option 1 ID : 6306801499017

Option 2 ID : 6306801499014

Option 3 ID : 6306801499015

Option 4 ID : 6306801499016

Status : Answered

Chosen Option : 4

**Q.10** Rajeev's rank in a test was 12th from the top and 23rd from the bottom. Find the number of students who gave the test.

**Ans** ☒ 1. 33

☒ 2. 34

☒ 3. 35

☒ 4. 36

Question ID : 630680384714

Option 1 ID : 6306801499745

Option 2 ID : 6306801499743

Option 3 ID : 6306801499742

Option 4 ID : 6306801499744

Status : Answered

Chosen Option : 2

**Q.11** Consider the following table where each letter is denoted by a symbol or a digit as shown.

Read the given conditions carefully and identify combinations that correctly represents 'EAGLQ' based on the coding system given in the table and the conditions that follow:

Conditions:

(i) If the first letter is a vowel and the last letter is a consonant, both are to be coded as the code of vowel

(ii) If both first and last letters are consonants, both are to be coded as 'o'

(iii) If first letter is a consonant and last letter is a vowel, the codes for first and last letters are to be interchanged

Digit / Symbol	7	@	*	5	8	#	3	8	%	2	9
Letter	D	L	E	G	W	F	I	A	Q	B	R

**Ans** ☒ 1. \*85@\*

☒ 2. %#5\*%\*

☒ 3. %85#%\*

☒ 4. #58%#

Question ID : 630680384578

Option 1 ID : 6306801499198

Option 2 ID : 6306801499201

Option 3 ID : 6306801499199

Option 4 ID : 6306801499200

Status : Answered

Chosen Option : 1

**Q.12** Select the odd number in the following number series.

824, 504, 348, 264, 224, 204

**Ans** ☒ 1. 204

☒ 2. 348

☒ 3. 264

☒ 4. 824

Question ID : 630680384699

Option 1 ID : 6306801499685

Option 2 ID : 6306801499683

Option 3 ID : 6306801499684

Option 4 ID : 6306801499682

Status : Not Answered

Chosen Option : --

**Q.13** In the following question, four pairs of letter-cluster have been given out of which three are alike in some manner, while one is different. Select the odd pair from the given options.

**Ans** ☒ 1. EIKM - NPRV

☒ 2. LDRT - GIWO

☒ 3. YBNV - EMYB

☒ 4. JQXF - UCQJ

Question ID : 630680384810

Option 1 ID : 6306801500128

Option 2 ID : 6306801500127

Option 3 ID : 6306801500129

Option 4 ID : 6306801500126

Status : Not Answered

Chosen Option : --

**Q.14** There is some relationship between the two terms (letter clusters) on the left of the sign (:). The same relationship exists between the two terms on the right of the sign (:), of which one is missing. Find the missing one from the four alternatives.  
CGKP : FJNS :: MQBS : ?

**Ans** ☒ 1. PTEV

☒ 2. PSEV

☒ 3. OTEV

☒ 4. OTVE

Question ID : 630680384806

Option 1 ID : 6306801500110

Option 2 ID : 6306801500111

Option 3 ID : 6306801500113

Option 4 ID : 6306801500112

Status : Answered

Chosen Option : 1



**Q.15** Which one of the given interchange in signs would make the given equation correct?

$$20 + 5 \times 6 - 2 \div 10 = 25$$

- Ans**
- ☒ 1. \* and -
  - ☒ 2. - and  $\div$
  - ☒ 3. - and +
  - ☒ 4.  $\div$  and \*

Question ID : 630680386166

Option 1 ID : 6306801505377

Option 2 ID : 6306801505374

Option 3 ID : 6306801505375

Option 4 ID : 6306801505376

Status : Answered

Chosen Option : 2

**Q.16** In the following question, a number series is given with one term missing. Choose the correct alternative that will continue the same pattern and fill in the blank spaces.

37, 42, 40, 45, 43, 48, 46, \_\_\_\_

- Ans**
- ☒ 1. 48
  - ☒ 2. 50
  - ☒ 3. 47
  - ☒ 4. 51

Question ID : 630680386192

Option 1 ID : 6306801505480

Option 2 ID : 6306801505479

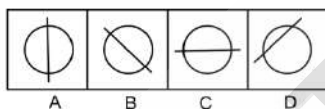
Option 3 ID : 6306801505481

Option 4 ID : 6306801505478

Status : Answered

Chosen Option : 4

**Q.17** Out of the four figures marked (A), (B), (C), and (D), three are similar in a certain manner and one figure is not like the other three. Identify the figure which is different from the rest.



- Ans**
- ☒ 1. C
  - ☒ 2. A
  - ☒ 3. D
  - ☒ 4. B

Question ID : 630680384842

Option 1 ID : 6306801500256

Option 2 ID : 6306801500254

Option 3 ID : 6306801500257

Option 4 ID : 6306801500255

Status : Answered

Chosen Option : 3

**Q.18** Consider the following table where each letter is denoted by a symbol or a digit as shown.  
Read the given conditions carefully and identify combinations that correctly represents '15\*14+9' based on the following coding system and the conditions that follow.

Conditions:

- (i) If the first element is an even digit and the last element is a symbol, both are to be coded as the code for the even digit.
- (ii) If the first element is a symbol and the last element is an odd digit, their codes are to be interchanged.
- (iii) If the first element is an odd digit and the last element is an even digit, both are to be coded as the code for the odd digit.

Digit / Symbol	?	*	4	+	2	#	9	-	5	%	!	1	8
Letter	J	D	A	V	M	I	Q	C	O	L	W	U	Y

- Ans ✔ 1. QODUAVW
- ✖ 2. WODUAVQ
- ✖ 3. QODUAVQ
- ✖ 4. WODUAVW

Question ID : 630680384783  
Option 1 ID : 6306801500019  
Option 2 ID : 6306801500018  
Option 3 ID : 6306801500021  
Option 4 ID : 6306801500020  
Status : Answered  
Chosen Option : 1

**Q.19** If 'S S T' means T is father of S, 'S # T' means T is mother of S, 'S \* T' means T is sister of S and 'S @ T' means T is husband of S, then which of the following option indicates the relationship 'D is paternal grandmother of A'?

- Ans ✖ 1. A\*Q#MSD
- ✖ 2. A@QSM#D
- ✖ 3. A#QSD\*M
- ✔ 4. A#Q@M#D

Question ID : 630680386171  
Option 1 ID : 6306801505394  
Option 2 ID : 6306801505397  
Option 3 ID : 6306801505396  
Option 4 ID : 6306801505395  
Status : Answered  
Chosen Option : 4

**Q.20** A statement is given followed by two conclusions numbered I and II. Consider the statement to be true and answer which one of the conclusions logically follows from the statements.

Statement: Morning exercises are good for health.

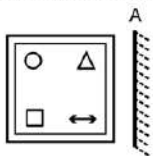
Conclusions:

- I. All healthy people do morning exercise.
- II. Evening exercises are harmful.

- Ans ✖ 1. If both I and II follow
- ✖ 2. If only conclusion II follows
- ✔ 3. If neither I nor II follows
- ✖ 4. If only conclusion I follows

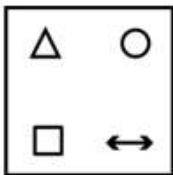
Question ID : 630680384785  
Option 1 ID : 6306801500028  
Option 2 ID : 6306801500027  
Option 3 ID : 6306801500029  
Option 4 ID : 6306801500026  
Status : Answered  
Chosen Option : 4

Q.21 Select the correct mirror image of the given figure when the mirror MN is placed to the right side of the figure.

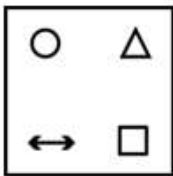


Ans

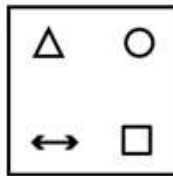
✗ 1.



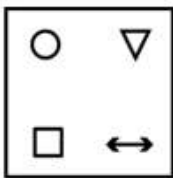
✗ 2.



✓ 3.



✗ 4.



Question ID : 630680384538

Option 1 ID : 6306801499039

Option 2 ID : 6306801499038

Option 3 ID : 6306801499041

Option 4 ID : 6306801499040

Status : Answered

Chosen Option : 3

Q.22 Which of the following numbers will replace the question mark (?) in the given series?

23, 24, 48, 49, 98, 99, ?

Ans

✗ 1. 100

✗ 2. 196

✓ 3. 198

✗ 4. 199

Question ID : 630680384466

Option 1 ID : 6306801498753

Option 2 ID : 6306801498751

Option 3 ID : 6306801498752

Option 4 ID : 6306801498750

Status : Answered

Chosen Option : 3

Q.23 Find the missing element in the given set to make them equal.

A = {Letters of the word UNIVERSE}

B = {NU, VI, ?, ES}

Ans ☒ 1. RE

☐ 2. ER

☐ 3. RI

☐ 4. UN

Question ID : 630680384793

Option 1 ID : 6306801500061

Option 2 ID : 6306801500058

Option 3 ID : 6306801500059

Option 4 ID : 6306801500060

Status : Answered

Chosen Option : 2

Q.24 M is father of O and P is son of N. Q is brother of M. If O is sister of P, Who is N to Q ?

Ans ☐ 1. Husband's brother

☒ 2. Brother's wife

☐ 3. Daughter

☐ 4. Husband

Question ID : 630680386174

Option 1 ID : 6306801505406

Option 2 ID : 6306801505409

Option 3 ID : 6306801505408

Option 4 ID : 6306801505407

Status : Answered

Chosen Option : 2

Q.25 How many pairs of letters in the word "PORTRAYAL" have the same number of letters between them as in the English alphabet (both forward and backward)?

Ans ☐ 1. Zero

☐ 2. Four

☒ 3. Three

☐ 4. Two

Question ID : 630680386154

Option 1 ID : 6306801505329

Option 2 ID : 6306801505327

Option 3 ID : 6306801505328

Option 4 ID : 6306801505326

Status : Answered

Chosen Option : 2

Section : General Awareness

Q.1 What is the range of Human Development Index?

- Ans
- ☒ 1. 0-100
  - ☒ 2. 0-5
  - ☒ 3. 0-15
  - ☒ 4. 0-1

Question ID : 630680384089  
Option 1 ID : 6306801497248  
Option 2 ID : 6306801497246  
Option 3 ID : 6306801497249  
Option 4 ID : 6306801497247  
Status : Answered  
Chosen Option : 1

Q.2 In which of the following states in India is the local festival Namkhan celebrated?

- Ans
- ☒ 1. Himachal Pradesh
  - ☒ 2. Gujrat
  - ☒ 3. Jharkhand
  - ☒ 4. Assam

Question ID : 630680384272  
Option 1 ID : 6306801497974  
Option 2 ID : 6306801497975  
Option 3 ID : 6306801497977  
Option 4 ID : 6306801497976  
Status : Answered  
Chosen Option : 2

Q.3 Who is the Co-Founder and CEO of Skyroot Aerospace, the leading domestic aerospace company credited with launching India's first privately developed rocket?

- Ans
- ☒ 1. Ritu Karidhal
  - ☒ 2. Dr. Sushmita Chatterjee
  - ☒ 3. Dr. Vikram Singh
  - ☒ 4. Pawan Chandana

Question ID : 630680384142  
Option 1 ID : 6306801497461  
Option 2 ID : 6306801497460  
Option 3 ID : 6306801497459  
Option 4 ID : 6306801497458  
Status : Answered  
Chosen Option : 2

Q.4 How many prominent kingdoms of South India were there during the medieval period 700 AD to 1857 AD?

- Ans
- ☒ 1. Three
  - ☒ 2. Two
  - ☒ 3. Ten
  - ☒ 4. Four

Question ID : 630680384321  
Option 1 ID : 6306801498170  
Option 2 ID : 6306801498172  
Option 3 ID : 6306801498173  
Option 4 ID : 6306801498171  
Status : Answered  
Chosen Option : 2

Q.5 Which is the second most prominent language in India?

- Ans ☒ 1. Marathi  
☒ 2. Bengali  
☒ 3. Assamese  
☒ 4. Hindi

Question ID : 630680384282  
Option 1 ID : 6306801498016  
Option 2 ID : 6306801498015  
Option 3 ID : 6306801498017  
Option 4 ID : 6306801498014  
Status : Answered  
Chosen Option : 4

Q.6 Who founded the Ramakrishna Mission and was a disciple of Ramakrishna Paramahansa?

- Ans ☒ 1. Raja Ram Mohan Roy  
☒ 2. Swami Vivekananda  
☒ 3. Swami Prabhupada  
☒ 4. Dayananda Saraswati

Question ID : 630680384446  
Option 1 ID : 6306801498671  
Option 2 ID : 6306801498670  
Option 3 ID : 6306801498673  
Option 4 ID : 6306801498672  
Status : Answered  
Chosen Option : 2

Q.7 Who among the following defeated Humayun?

- Ans ☒ 1. Amar Singh  
☒ 2. Sher Khan  
☒ 3. Safavid Shah  
☒ 4. Khan Jahan Lodi

Question ID : 630680384326  
Option 1 ID : 6306801498192  
Option 2 ID : 6306801498190  
Option 3 ID : 6306801498191  
Option 4 ID : 6306801498193  
Status : Answered  
Chosen Option : 2

Q.8 Which among the following states' police forces have started two women safety squad?

- Ans ☒ 1. Kerala  
☒ 2. Chennai  
☒ 3. Jharkhand  
☒ 4. Jammu and Kashmir

Question ID : 630680384048  
Option 1 ID : 6306801497083  
Option 2 ID : 6306801497082  
Option 3 ID : 6306801497085  
Option 4 ID : 6306801497084  
Status : Answered  
Chosen Option : 1

Q.9 The Chief Minister of which of the following states has launched two initiatives to leverage the power of Artificial Intelligence (AI) in the state?

- Ans
- ☒ 1. Gujrat
  - ☒ 2. Karnataka
  - ☒ 3. Mumbai
  - ☒ 4. Odisha

Question ID : 630680384036  
Option 1 ID : 6306801497037  
Option 2 ID : 6306801497034  
Option 3 ID : 6306801497035  
Option 4 ID : 6306801497036  
Status : Answered  
Chosen Option : 1

Q.10 Which of the following states of India hosted the Squash World Cup recently?

- Ans
- ☒ 1. Kerala
  - ☒ 2. Rajasthan
  - ☒ 3. Meghalaya
  - ☒ 4. Chennai

Question ID : 630680384053  
Option 1 ID : 6306801497105  
Option 2 ID : 6306801497104  
Option 3 ID : 6306801497103  
Option 4 ID : 6306801497102  
Status : Answered  
Chosen Option : 4

Q.11 In which year did the Partition of Bengal take place?

- Ans
- ☒ 1. 1902
  - ☒ 2. 1908
  - ☒ 3. 1900
  - ☒ 4. 1905

Question ID : 630680384331  
Option 1 ID : 6306801498212  
Option 2 ID : 6306801498210  
Option 3 ID : 6306801498213  
Option 4 ID : 6306801498211  
Status : Answered  
Chosen Option : 1

Q.12 Which of the following initiatives in undertaken by the Union Government of India to enumerate all people engaged in hazardous cleaning of sewers and septic tanks?

- Ans
- ☒ 1. Mission Karmayogi
  - ☒ 2. Savya Shiksha Abhiyaan
  - ☒ 3. National Action Plan for Mechanised Sanitation Ecosystem (NAMASTE).
  - ☒ 4. Aashwasan Campaign

Question ID : 630680384045  
Option 1 ID : 6306801497070  
Option 2 ID : 6306801497073  
Option 3 ID : 6306801497071  
Option 4 ID : 6306801497072  
Status : Answered  
Chosen Option : 3

Q.13 Which of the following is a religious festival of India?

- Ans ☒ 1. Gandhi Jayanti  
☒ 2. Dussehra  
☒ 3. Republic Day  
☒ 4. Hornbill festival

Question ID : 630680384074  
Option 1 ID : 6306801497188  
Option 2 ID : 6306801497187  
Option 3 ID : 6306801497186  
Option 4 ID : 6306801497189  
Status : Answered  
Chosen Option : 2

Q.14 In which of the following states of India is the shortest river system located?

- Ans ☒ 1. Mumbai  
☒ 2. Rajasthan  
☒ 3. Assam  
☒ 4. Gujrat

Question ID : 630680384304  
Option 1 ID : 6306801498102  
Option 2 ID : 6306801498104  
Option 3 ID : 6306801498105  
Option 4 ID : 6306801498103  
Status : Answered  
Chosen Option : 2

Q.15 Which if the following is a cause of Global Warming?

- Ans ☒ 1. Soil Erosion  
☒ 2. Rain  
☒ 3. Deforestation  
☒ 4. Afforestation

Question ID : 630680384092  
Option 1 ID : 6306801497259  
Option 2 ID : 6306801497258  
Option 3 ID : 6306801497260  
Option 4 ID : 6306801497261  
Status : Answered  
Chosen Option : 3

Q.16 Which of the following states in India is the largest producer of Bamboo?

- Ans ☒ 1. Jharkhand  
☒ 2. Goa  
☒ 3. Assam  
☒ 4. Gujrat

Question ID : 630680384309  
Option 1 ID : 6306801498124  
Option 2 ID : 6306801498125  
Option 3 ID : 6306801498122  
Option 4 ID : 6306801498123  
Status : Not Answered  
Chosen Option : --



Q.17 The "Dependency Ratio" is a demographic indicator that measures the proportion of the dependent population (children and elderly) to the working-age population. A high dependency ratio indicates:

- Ans
- ☐ 1. An aging population with fewer dependents
  - ☐ 2. A declining birth rate
  - ☐ 3. A large working-age population
  - ☒ 4. A heavy burden on the working-age population to support dependents

Question ID : 630680384212  
Option 1 ID : 6306801497739  
Option 2 ID : 6306801497740  
Option 3 ID : 6306801497738  
Option 4 ID : 6306801497741  
Status : Answered  
Chosen Option : 4

Q.18 Which is the highest peak in the Eastern Ghats mountain range?

- Ans
- ☐ 1. Kanchenjunga
  - ☐ 2. Arma Konda
  - ☐ 3. Kasi
  - ☒ 4. Mahendragiri

Question ID : 630680384429  
Option 1 ID : 6306801498604  
Option 2 ID : 6306801498605  
Option 3 ID : 6306801498603  
Option 4 ID : 6306801498602  
Status : Answered  
Chosen Option : 4

Q.19 The autobiography "Unfinished" is written by which Indian actress and former Miss World?

- Ans
- ☐ 1. Diana Hayden
  - ☐ 2. Manushi Chhillar
  - ☐ 3. Yukta Mookhey
  - ☒ 4. Priyanka Chopra Jonas

Question ID : 630680384159  
Option 1 ID : 6306801497527  
Option 2 ID : 6306801497528  
Option 3 ID : 6306801497529  
Option 4 ID : 6306801497526  
Status : Not Answered  
Chosen Option : --

**Q.20** Name the investment trading strategy that deals with a particular action in the stock market due declining price speculation

- Ans**    ☒ 1. Short selling of stock  
          ☒ 2. Margin money  
          ☒ 3. Cash purchase of stock  
          ☒ 4. Long position

Question ID : 630680384408  
Option 1 ID : 6306801498518  
Option 2 ID : 6306801498520  
Option 3 ID : 6306801498519  
Option 4 ID : 6306801498521  
Status : Answered  
Chosen Option : 1

**Q.21** Which state of India has the highest steel producing capacity?

- Ans**    ☒ 1. Odisha  
          ☒ 2. Rajasthan  
          ☒ 3. Assam  
          ☒ 4. Kerala

Question ID : 630680384299  
Option 1 ID : 6306801498084  
Option 2 ID : 6306801498082  
Option 3 ID : 6306801498085  
Option 4 ID : 6306801498083  
Status : Not Answered  
Chosen Option : --

**Q.22** What is the output per unit of variable input called?

- Ans**    ☒ 1. Average cost  
          ☒ 2. Total Product  
          ☒ 3. Average Product  
          ☒ 4. Marginal Product

Question ID : 630680384287  
Option 1 ID : 6306801498034  
Option 2 ID : 6306801498036  
Option 3 ID : 6306801498035  
Option 4 ID : 6306801498037  
Status : Answered  
Chosen Option : 1

**Q.23** Which literary award in India is considered the highest literary recognition and is given annually for outstanding contribution to Indian literature?

- Ans**    ☒ 1. Booker Prize  
          ☒ 2. Padma Vibhushan  
          ☒ 3. Jnanpith Award  
          ☒ 4. Sahitya Akademi Award

Question ID : 630680386422  
Option 1 ID : 6306801506399  
Option 2 ID : 6306801506401  
Option 3 ID : 6306801506400  
Option 4 ID : 6306801506398  
Status : Answered  
Chosen Option : 4

Q.24 Who was the first female Prime Minister of India?

- Ans ☒ 1. Sarojini Naidu  
☒ 2. Indira Gandhi  
☒ 3. Pratibha Patil  
☒ 4. Jayalalithaa

Question ID : 630680386481  
Option 1 ID : 6306801506634  
Option 2 ID : 6306801506635  
Option 3 ID : 6306801506637  
Option 4 ID : 6306801506636  
Status : Answered  
Chosen Option : 2

Q.25 In which of the following states of India was the 2023 edition of the SAFF Championship held in June 2023?

- Ans ☒ 1. Chennai  
☒ 2. Kolkata  
☒ 3. Mumbai  
☒ 4. Bangalore

Question ID : 630680384055  
Option 1 ID : 6306801497113  
Option 2 ID : 6306801497112  
Option 3 ID : 6306801497111  
Option 4 ID : 6306801497110  
Status : Answered  
Chosen Option : 4

Section : Quantitative Aptitude

Q.1 The average runs of Sehwag and Sachin in a cricket match was 85, the average runs of Sachin and Virat were 72 and the average runs of Virat and Sehwag were 65  
Find the runs scored by Sachin in the match.

- Ans ☒ 1. 75  
☒ 2. 92  
☒ 3. 82  
☒ 4. 87

Question ID : 630680385132  
Option 1 ID : 6306801501416  
Option 2 ID : 6306801501417  
Option 3 ID : 6306801501415  
Option 4 ID : 6306801501414  
Status : Answered  
Chosen Option : 2

Q.2 Choose the correct option.

Ans ☒ 1.

Alternate angles are angles that occur on same sides of the transversal line and the different size.

☒ 2.

Alternate angles are angles that occur on same sides of the transversal line and the same size.

☒ 3.

Alternate angles are angles that occur on opposite sides of the transversal line and the different size.

☒ 4.

Alternate angles are angles that occur on opposite sides of the transversal line and the same size.

Question ID : 630680401824

Option 1 ID : 6306801567069

Option 2 ID : 6306801567068

Option 3 ID : 6306801567067

Option 4 ID : 6306801567066

Status : Answered

Chosen Option : 4

Q.3 Two tubes "White" and "Blue" are required to fill a container. The white tube takes 12 minutes to fill the container and the blue tube takes 14 minutes to fill the same container. The container can be emptied by a third tube yellow in 8 minutes. If all the tubes are opened at the same moment, what part of the container will remain unfilled at the end of 7 minutes?

Ans

☒ 1.  $\frac{7}{24}$

☒ 2.  $\frac{5}{24}$

☒ 3.  $\frac{19}{24}$

☒ 4.  $\frac{17}{24}$

Question ID : 630680385856

Option 1 ID : 6306801504143

Option 2 ID : 6306801504142

Option 3 ID : 6306801504145

Option 4 ID : 6306801504144

Status : Not Answered

Chosen Option : --

Q.4 Solve:

$$\frac{(675 + 269)^2 + (675 - 269)^2}{(675 \times 675) + (269 \times 269)}$$

Ans

☒ 1. 1

☒ 2. -1

☒ 3. 2

☒ 4. 0

Question ID : 630680385769

Option 1 ID : 6306801503796

Option 2 ID : 6306801503794

Option 3 ID : 6306801503797

Option 4 ID : 6306801503795

Status : Answered

Chosen Option : 3

**Q.5** Ramesh earns an average of ₹320 per week during a 40 hours week. He increases his rates in final week of the month by 75%. Find the commission he earns in that week, if he puts in 50 hours during that final week?

- Ans
- ☒ 1. ₹750
  - ☒ 2. ₹700
  - ☒ 3. ₹500
  - ☒ 4. ₹250

Question ID : 630680385824

Option 1 ID : 6306801504017

Option 2 ID : 6306801504016

Option 3 ID : 6306801504015

Option 4 ID : 6306801504014

Status : Not Answered

Chosen Option : --

**Q.6** If  $\operatorname{cosec}^2 A = 2$ , and A is an acute angle, then find the value of  $\cos A$ .

- Ans
- ☒ 1. 2
  - ☒ 2.  $\frac{1}{\sqrt{2}}$
  - ☒ 3.  $\sqrt{2}$
  - ☒ 4. 1

Question ID : 630680384947

Option 1 ID : 6306801500677

Option 2 ID : 6306801500676

Option 3 ID : 6306801500674

Option 4 ID : 6306801500675

Status : Answered

Chosen Option : 2

**Q.7** ₹2525 are distributed among Shekar, Dixon and Divya . If money given to them is decreased by ₹27, ₹45 and ₹21 respectively, then they have money in the ratio of 8:13:11. What is the amount given to Dixon?

- Ans
- ☒ 1. ₹1185
  - ☒ 2. ₹1225
  - ☒ 3. ₹956
  - ☒ 4. ₹1033

Question ID : 630680385851

Option 1 ID : 6306801504125

Option 2 ID : 6306801504124

Option 3 ID : 6306801504123

Option 4 ID : 6306801504122

Status : Not Attempted and Marked For Review

Chosen Option : --

Q.8 If  $a = \sqrt{3} + \sqrt{4} + \sqrt{5}$  then  $a^4 - 8a^3 + 8a^2 + 32a = ?$

- Ans
- ☒ 1. 15
  - ☒ 2. 1
  - ☒ 3. 44
  - ☒ 4. 0

Question ID : 630680385776  
Option 1 ID : 6306801503824  
Option 2 ID : 6306801503823  
Option 3 ID : 6306801503825  
Option 4 ID : 6306801503822  
Status : Not Answered  
Chosen Option : --

Q.9 After getting two successive discounts Mayur got a shirt at ₹153 whose marked price is ₹765. If the second discount is 25% find the first discount.

- Ans
- ☒ 1. 77.33%
  - ☒ 2. 76.83%
  - ☒ 3. 73.33%
  - ☒ 4. 75%

Question ID : 630680385842  
Option 1 ID : 6306801504089  
Option 2 ID : 6306801504088  
Option 3 ID : 6306801504086  
Option 4 ID : 6306801504087  
Status : Answered  
Chosen Option : 3

Q.10 If  $\frac{(m^{28} + 1)}{m^{14}} = 23$  then  $\frac{(m^{42} + 1)}{m^{21}} = ?$

- Ans
- ☒ 1. 48
  - ☒ 2. 78
  - ☒ 3. 110
  - ☒ 4. 25

Question ID : 630680385771  
Option 1 ID : 6306801503803  
Option 2 ID : 6306801503804  
Option 3 ID : 6306801503805  
Option 4 ID : 6306801503802  
Status : Not Answered  
Chosen Option : --

**Q.11** The price of an article is successively increased by 25%, 40% and 45% respectively. What is the net percentage increase?

- Ans**
- ☒ 1. 135.75%
  - ☒ 2. 153.75%
  - ☒ 3. 110%
  - ☒ 4. 75%

Question ID : 630680385005  
Option 1 ID : 6306801500907  
Option 2 ID : 6306801500909  
Option 3 ID : 6306801500906  
Option 4 ID : 6306801500908  
Status : Not Answered  
Chosen Option : --

**Q.12** A room has a length of 2 m, breadth of 14 m and a height of 23 m. Find the length of the longest pole that can be placed in the room.

- Ans**
- ☒ 1. 27 m
  - ☒ 2. 31 m
  - ☒ 3. 17 m
  - ☒ 4. 33 m

Question ID : 630680385806  
Option 1 ID : 6306801503943  
Option 2 ID : 6306801503944  
Option 3 ID : 6306801503942  
Option 4 ID : 6306801503945  
Status : Not Answered  
Chosen Option : --

**Q.13** Find the volume of a cone whose height is 21 cm and radius is 14 cm.

- Ans**
- ☒ 1. 5421 cm<sup>3</sup>
  - ☒ 2. 2278 cm<sup>3</sup>
  - ☒ 3. 4312 cm<sup>3</sup>
  - ☒ 4. 3413 cm<sup>3</sup>

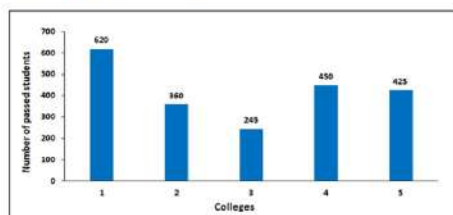
Question ID : 630680385145  
Option 1 ID : 6306801501469  
Option 2 ID : 6306801501468  
Option 3 ID : 6306801501466  
Option 4 ID : 6306801501467  
Status : Answered  
Chosen Option : 3

Q.14 If  $x = \sqrt{5} + \sqrt{6}$ , then the value of  $(x + \frac{1}{x})$  is \_\_\_\_\_.

- Ans
- ☐ 1.  $\sqrt{24}$
  - ☐ 2.  $2\sqrt{5}$
  - ☐ 3.  $\sqrt{11}$
  - ☒ 4.  $2\sqrt{6}$

Question ID : 630680385812  
Option 1 ID : 6306801503967  
Option 2 ID : 6306801503966  
Option 3 ID : 6306801503968  
Option 4 ID : 6306801503969  
Status : Answered  
Chosen Option : 4

Q.15 Given bar graph shows the number of students passed in B.E. final year from six different colleges. Failed students of college 1 is 100 more than that of college 4. If ratio between total strength of college 1 to college 4 is 3 : 2, then find total number of failed students from both colleges together?



- Ans
- ☐ 1. 120
  - ☐ 2. 175
  - ☐ 3. 245
  - ☒ 4. 280

Question ID : 630680385792  
Option 1 ID : 6306801503886  
Option 2 ID : 6306801503887  
Option 3 ID : 6306801503888  
Option 4 ID : 6306801503889  
Status : Not Answered  
Chosen Option : --

Q.16 Vikrant makes a profit of 23% on cost price by selling a fridge for ₹6150. If the cost price of the fridge is increased by 5% and he wants to earn the same profit, what will be the approximate new profit percent on selling price?

- Ans
- ☐ 1. 25%
  - ☒ 2. 18%
  - ☐ 3. 20%
  - ☐ 4. 15%

Question ID : 630680385027  
Option 1 ID : 6306801500997  
Option 2 ID : 6306801500995  
Option 3 ID : 6306801500996  
Option 4 ID : 6306801500994  
Status : Not Answered  
Chosen Option : --



**Q.17** If two angles of a quadrilateral are  $70^\circ$  and  $100^\circ$ . Find the sum of other two angles.

- Ans**
- ☒ 1.  $160^\circ$
  - ☒ 2.  $180^\circ$
  - ☒ 3.  $170^\circ$
  - ☒ 4.  $190^\circ$

Question ID : 630680401827  
Option 1 ID : 6306801567081  
Option 2 ID : 6306801567079  
Option 3 ID : 6306801567080  
Option 4 ID : 6306801567078  
Status : Answered  
Chosen Option : 4

**Q.18** If the radius of a sphere is increased by 20% then the volume will be increased by:

- Ans**
- ☒ 1. 64.64%
  - ☒ 2. 85.4%
  - ☒ 3. 72.8%
  - ☒ 4. 68%

Question ID : 630680385796  
Option 1 ID : 6306801503904  
Option 2 ID : 6306801503903  
Option 3 ID : 6306801503902  
Option 4 ID : 6306801503905  
Status : Answered  
Chosen Option : 3

**Q.19** Vivek goes to a place on bicycle at speed of 18 km/hr and comes back at lower speed. If the average speed is 6.4 km/hr in total journey, then the return speed (in km/hr) is :

- Ans**
- ☒ 1. 3.89 kmph
  - ☒ 2. 4.86 kmph
  - ☒ 3. 3.92 kmph
  - ☒ 4. 3.57 kmph

Question ID : 630680385779  
Option 1 ID : 6306801503835  
Option 2 ID : 6306801503834  
Option 3 ID : 6306801503836  
Option 4 ID : 6306801503837  
Status : Answered  
Chosen Option : 1

**Q.20** Akash, Vikram and Rishab are painters. Akash can paint a wall in 12 days, Vikram can paint the same wall in 8 days and Rishab can do the same job in  $\frac{4}{5}$  th time required by both Akash and Vikram. Akash and Vikram work together for 3 days, and the remaining work was done by Rishab. Find the number of full days Rishab worked for?

- Ans**
- ☒ 1. 4 days
  - ☒ 2. 2 days
  - ☒ 3. 1 day
  - ☒ 4. 6 days

Question ID : 630680385859

Option 1 ID : 6306801504156

Option 2 ID : 6306801504155

Option 3 ID : 6306801504154

Option 4 ID : 6306801504157

Status : Not Answered

Chosen Option : --

**Q.21** The diagonal of a cube is  $12\sqrt{3}$  cm. Find its volume.

- Ans**
- ☒ 1. 2744 cm<sup>3</sup>
  - ☒ 2. 1728 cm<sup>3</sup>
  - ☒ 3. 4096 cm<sup>3</sup>
  - ☒ 4. 2197 cm<sup>3</sup>

Question ID : 630680384987

Option 1 ID : 6306801500836

Option 2 ID : 6306801500834

Option 3 ID : 6306801500837

Option 4 ID : 6306801500835

Status : Answered

Chosen Option : 2

**Q.22** ₹600 are divided among Aman, Bhuj and Chopra such that ₹40 more than  $\frac{2}{5}$  th of Aman's share, ₹20 more than  $\frac{2}{7}$  th of Bhuj's Share and ₹10 more than  $\frac{9}{17}$  th of Chopra's share, all are equal. What is Bhuj's share ?

- Ans**
- ☒ 1. ₹300
  - ☒ 2. ₹290
  - ☒ 3. ₹280
  - ☒ 4. ₹250

Question ID : 630680385848

Option 1 ID : 6306801504113

Option 2 ID : 6306801504112

Option 3 ID : 6306801504111

Option 4 ID : 6306801504110

Status : Not Answered

Chosen Option : --

**Q.23** Find the area of the sector if radius of that circle is 2 cm and angle of that sector is  $60^\circ$ .

- Ans**
- ☒ 1.  $3.09 \text{ cm}^2$
  - ☒ 2.  $2.00 \text{ cm}^2$
  - ☒ 3.  $2.09 \text{ cm}^2$
  - ☒ 4.  $3.00 \text{ cm}^2$

Question ID : **630680401820**

Option 1 ID : **6306801567051**

Option 2 ID : **6306801567052**

Option 3 ID : **6306801567053**

Option 4 ID : **6306801567050**

Status : **Answered**

Chosen Option : **3**

**Q.24** In a certain office  $\frac{1}{2}$  of the employees are women  $\frac{1}{4}$  of the women are married and  $\frac{1}{3}$  of the married women have children. If  $\frac{2}{3}$  of the man are married and  $\frac{2}{3}$  of the married men have children. What part of employee's are without children ?

- Ans**
- ☒ 1.  $\frac{53}{49}$
  - ☒ 2.  $\frac{23}{18}$
  - ☒ 3.  $\frac{11}{13}$
  - ☒ 4.  $\frac{53}{72}$

Question ID : **630680385816**

Option 1 ID : **6306801503985**

Option 2 ID : **6306801503982**

Option 3 ID : **6306801503984**

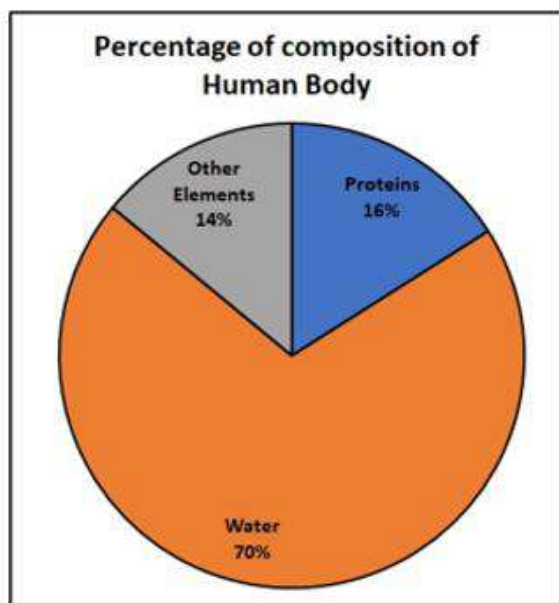
Option 4 ID : **6306801503983**

Status : **Not Answered**

Chosen Option : **--**



Q.25 What is the percentage of protein in the body?



- Ans
- ☒ 1. 30%
  - ☒ 2. 14%
  - ☒ 3. 16%
  - ☒ 4. 70%

Question ID : 630680401791  
Option 1 ID : 6306801566937  
Option 2 ID : 6306801566934  
Option 3 ID : 6306801566935  
Option 4 ID : 6306801566936  
Status : Answered  
Chosen Option : 3

Section : English Comprehension



**Comprehension:**

Read the given passage carefully and select the most appropriate answer to the questions that follow.

In the mother's eyes there could be no comparison between Vronsky and Levin. She disliked in Levin his strange and uncompromising opinions and his shyness in society, founded, as she supposed, on his pride and his queer sort of life, as she considered it, absorbed in cattle and peasants. She did not very much like it that he, who was in love with her daughter, had kept coming to the house for six weeks, as though he were waiting for something, inspecting, as though he were afraid, he might be doing them too great an honour by making an offer, and did not realize that a man, who continually visits at a house where there is a young unmarried girl, is bound to make his intentions clear. And suddenly, without doing so, he disappeared. 'It's as well he's not attractive enough for Kitty to have fallen in love with him,' thought the mother. Vronsky satisfied all the mother's desires. Very wealthy, clever, of aristocratic family, on the highroad to a brilliant career in the army.

**SubQuestion No : 1**

**Q.1 From the given options, identify the suitable title for the passage.**

**Ans**     1. The Suitable Match

 2. Levin

 3. Vronsky

 4. Mother's Favourite

Question ID : 630680385676

Option 1 ID : 6306801503447

Option 2 ID : 6306801503448

Option 3 ID : 6306801503446

Option 4 ID : 6306801503449

Status : Answered

Chosen Option : 1

**Comprehension:**

Read the given passage carefully and select the most appropriate answer to the questions that follow.

In the mother's eyes there could be no comparison between Vronsky and Levin. She disliked in Levin his strange and uncompromising opinions and his shyness in society, founded, as she supposed, on his pride and his queer sort of life, as she considered it, absorbed in cattle and peasants. She did not very much like it that he, who was in love with her daughter, had kept coming to the house for six weeks, as though he were waiting for something, inspecting, as though he were afraid, he might be doing them too great an honour by making an offer, and did not realize that a man, who continually visits at a house where there is a young unmarried girl, is bound to make his intentions clear. And suddenly, without doing so, he disappeared. 'It's as well he's not attractive enough for Kitty to have fallen in love with him,' thought the mother. Vronsky satisfied all the mother's desires. Very wealthy, clever, of aristocratic family, on the highroad to a brilliant career in the army.

**SubQuestion No : 2**

**Q.2 Identify the correct inference that can be drawn from the passage.**

**Ans**     1. Vronsky and Levin are brothers.

 2. Vronsky is not keen on marrying Kitty.

 3. The mother preferred Levin over Vronsky for her daughter.

 4. The mother is looking for a suitable marriage prospect for her daughter.

Question ID : 630680385678

Option 1 ID : 6306801503455

Option 2 ID : 6306801503454

Option 3 ID : 6306801503457

Option 4 ID : 6306801503456

Status : Answered

Chosen Option : 4

**Comprehension:**

Read the given passage carefully and select the most appropriate answer to the questions that follow.

In the mother's eyes there could be no comparison between Vronsky and Levin. She disliked in Levin his strange and uncompromising opinions and his shyness in society, founded, as she supposed, on his pride and his queer sort of life, as she considered it, absorbed in cattle and peasants. She did not very much like it that he, who was in love with her daughter, had kept coming to the house for six weeks, as though he were waiting for something, inspecting, as though he were afraid, he might be doing them too great an honour by making an offer, and did not realize that a man, who continually visits at a house where there is a young unmarried girl, is bound to make his intentions clear. And suddenly, without doing so, he disappeared. 'It's as well he's not attractive enough for Kitty to have fallen in love with him,' thought the mother. Vronsky satisfied all the mother's desires. Very wealthy, clever, of aristocratic family, on the highroad to a brilliant career in the army.

**SubQuestion No : 3**

**Q.3 Which of the following statements is not true with respect to the passage.**

- Ans ☒ 1. The mother liked Vronsky as he satisfied all her desires.
- ☒ 2. The mother did not appreciate Levin's coming to her house so frequently.
- ☒ 3. Levin visited the mother's house for about 6 weeks before disappearing.
- ☒ 4. Vronsky was a wealthy business man.

Question ID : 630680385677  
Option 1 ID : 6306801503450  
Option 2 ID : 6306801503453  
Option 3 ID : 6306801503452  
Option 4 ID : 6306801503451  
Status : Answered  
Chosen Option : 4

**Comprehension:**

Read the given passage carefully and select the most appropriate answer to the questions that follow.

In the mother's eyes there could be no comparison between Vronsky and Levin. She disliked in Levin his strange and uncompromising opinions and his shyness in society, founded, as she supposed, on his pride and his queer sort of life, as she considered it, absorbed in cattle and peasants. She did not very much like it that he, who was in love with her daughter, had kept coming to the house for six weeks, as though he were waiting for something, inspecting, as though he were afraid, he might be doing them too great an honour by making an offer, and did not realize that a man, who continually visits at a house where there is a young unmarried girl, is bound to make his intentions clear. And suddenly, without doing so, he disappeared. 'It's as well he's not attractive enough for Kitty to have fallen in love with him,' thought the mother. Vronsky satisfied all the mother's desires. Very wealthy, clever, of aristocratic family, on the highroad to a brilliant career in the army.

**SubQuestion No : 4**

**Q.4 Select the options the most appropriate meaning of the bracketed word given in the sentence below.**

'... on his pride and his (queer) sort of life ...'

- Ans ☒ 1. aristocratic
- ☒ 2. strange
- ☒ 3. inconsiderate
- ☒ 4. poor

Question ID : 630680385679  
Option 1 ID : 6306801503459  
Option 2 ID : 6306801503460  
Option 3 ID : 6306801503458  
Option 4 ID : 6306801503461  
Status : Answered  
Chosen Option : 2

Q.5 Select the correct question tag for the following statement:  
"He won't be late, \_\_\_\_\_?"

- Ans
- ☒ 1. isn't he?
  - ☐ 2. will he?
  - ☒ 3. doesn't he?
  - ☒ 4. won't he?

Question ID : 630680385239  
Option 1 ID : 6306801501844  
Option 2 ID : 6306801501842  
Option 3 ID : 6306801501845  
Option 4 ID : 6306801501843  
Status : Answered  
Chosen Option : 4

Q.6 Select the word from the options which is exactly opposite in meaning to the bracketed word given in the sentence below.  
There was even work to make it (amenable) to industrial looms.

- Ans
- ☒ 1. unsusceptible
  - ☒ 2. abstract
  - ☒ 3. invisible
  - ☒ 4. undecorated

Question ID : 630680385649  
Option 1 ID : 6306801503354  
Option 2 ID : 6306801503357  
Option 3 ID : 6306801503355  
Option 4 ID : 6306801503356  
Status : Answered  
Chosen Option : 1

Q.7 Select the word segment that substitutes the bracketed segment correctly and completes the sentence meaningfully.  
The marathon runner's performance was exceptional; she [demonstrated tremendous] stamina and endurance throughout the race.

- Ans
- ☒ 1. possessed insignificant
  - ☒ 2. showcased immense
  - ☒ 3. lacked basic
  - ☒ 4. revealed mediocre

Question ID : 630680385719  
Option 1 ID : 6306801503609  
Option 2 ID : 6306801503607  
Option 3 ID : 6306801503606  
Option 4 ID : 6306801503608  
Status : Answered  
Chosen Option : 2

**Q.8** The sentence given below contains an idiom. Identify the idiom and choose its correct meaning from the given options.  
The radio host is known for always being on his high horse, despite the fact that everyone knows he's a creep.

- Ans** ☒ 1. To find a way to deal something.  
☒ 2. Acting superior and arrogant.  
☒ 3. To behave or look strange.  
☒ 4. To find out the real cause of something.

Question ID : 630680385640  
Option 1 ID : 6306801503320  
Option 2 ID : 6306801503319  
Option 3 ID : 6306801503318  
Option 4 ID : 6306801503321  
Status : Answered  
Chosen Option : 2

**Q.9** Select the most appropriate word for the given phrase.  
Government instructions that limit trade in some way.

- Ans** ☒ 1. Aikido  
☒ 2. Impeach  
☒ 3. Embargo  
☒ 4. Carte blanche

Question ID : 630680385634  
Option 1 ID : 6306801503297  
Option 2 ID : 6306801503296  
Option 3 ID : 6306801503295  
Option 4 ID : 6306801503294  
Status : Answered  
Chosen Option : 4

**Q.10** Select the most appropriate antonym of the given word.  
Advance

- Ans** ☒ 1. Homage  
☒ 2. Slandorous  
☒ 3. Assault  
☒ 4. Retreat

Question ID : 630680385644  
Option 1 ID : 6306801503336  
Option 2 ID : 6306801503335  
Option 3 ID : 6306801503334  
Option 4 ID : 6306801503337  
Status : Answered  
Chosen Option : 4



**Q.11** Select the most appropriate synonym to substitute the bracketed word in the given sentence.  
She received an (accolade) from the president for her outstanding contribution to the field of science.

- Ans
- ☒ 1. Indictment
  - ☒ 2. Criticism
  - ☒ 3. Praise
  - ☒ 4. Stubborn

Question ID : 630680385530  
Option 1 ID : 6306801502914  
Option 2 ID : 6306801502917  
Option 3 ID : 6306801502915  
Option 4 ID : 6306801502916  
Status : Answered  
Chosen Option : 3

**Q.12** Select the most appropriate word for the given phrase.  
Humour that describes the weaknesses.

- Ans
- ☒ 1. Screech
  - ☒ 2. Satire
  - ☒ 3. Grunt
  - ☒ 4. Tenacious

Question ID : 630680385628  
Option 1 ID : 6306801503272  
Option 2 ID : 6306801503270  
Option 3 ID : 6306801503273  
Option 4 ID : 6306801503271  
Status : Answered  
Chosen Option : 1

**Q.13** Fill in the blank with the most appropriate option  
He studied hard for the exam. \_\_\_\_\_, he was able to score well.

- Ans
- ☒ 1. Conversely
  - ☒ 2. Consequently
  - ☒ 3. Furthermore
  - ☒ 4. However

Question ID : 630680385466  
Option 1 ID : 6306801502681  
Option 2 ID : 6306801502678  
Option 3 ID : 6306801502679  
Option 4 ID : 6306801502680  
Status : Answered  
Chosen Option : 2

Q.14 Select the most appropriate synonym of the given word.  
Bleakness

- Ans ☒ 1. Sincerity  
☒ 2. Desolation  
☒ 3. Behead  
☒ 4. Affection

Question ID : 630680385529  
Option 1 ID : 6306801502913  
Option 2 ID : 6306801502911  
Option 3 ID : 6306801502910  
Option 4 ID : 6306801502912  
Status : Answered  
Chosen Option : 2

Q.15 Select the most appropriate missing sentence to complete the paragraph meaningfully.  
Kitty felt that Anna was perfectly simple and was concealing nothing, but that she had another higher world of \_\_\_\_\_.

- Ans ☒ 1. who would find him reading.  
☒ 2. who have tails just whisk the flies off without thinking about it.  
☒ 3. who will always wait for them.  
☒ 4. interests inaccessible to her, complex and poetic.

Question ID : 630680385597  
Option 1 ID : 6306801503168  
Option 2 ID : 6306801503167  
Option 3 ID : 6306801503169  
Option 4 ID : 6306801503166  
Status : Answered  
Chosen Option : 4

Q.16 Select the word segment that substitutes (replaces) the bracketed word segment correctly and completes the sentence meaningfully. Select the option 'no correction required' if the sentence is correct as given.  
(I either spoke or looked) at anyone, but sat motionless.

- Ans ☒ 1. I neither spoke nor looked  
☒ 2. I neither spoke or looked  
☒ 3. I either spoke nor looked  
☒ 4. No correction required.

Question ID : 630680385623  
Option 1 ID : 6306801503250  
Option 2 ID : 6306801503251  
Option 3 ID : 6306801503252  
Option 4 ID : 6306801503253  
Status : Answered  
Chosen Option : 1

**Q.17** Please select the most suitable phrasal verb from the options provided to fill in the blank.  
She was feeling very tired after the long day at work, so she decided to \_\_\_\_\_ and take a short nap before dinner.

- Ans
- ☒ 1. put on
  - ☒ 2. put off
  - ☒ 3. put up
  - ☒ 4. put out

Question ID : 630680385452  
Option 1 ID : 6306801502623  
Option 2 ID : 6306801502622  
Option 3 ID : 6306801502624  
Option 4 ID : 6306801502625  
Status : Answered  
Chosen Option : 2

**Q.18** Fill in the blank with the correct part of speech.  
Wow, that view is absolutely \_\_\_\_\_!

- Ans
- ☒ 1. well
  - ☒ 2. omen
  - ☒ 3. huge
  - ☒ 4. fantastic

Question ID : 630680385232  
Option 1 ID : 6306801501815  
Option 2 ID : 6306801501814  
Option 3 ID : 6306801501816  
Option 4 ID : 6306801501817  
Status : Answered  
Chosen Option : 4

**Q.19** Below given is a situation, upon your understanding of the situation choose a proverb which suits it.  
John's lack of preparation for the important presentation was evident from the very start. He stumbled over his words, couldn't answer basic questions, and seemed unorganized.

- Ans
- ☒ 1. A bad beginning makes a bad ending.
  - ☒ 2. A bad workman quarrels with his tools.
  - ☒ 3. A bad corn promise is better than a good lawsuit.
  - ☒ 4. A bargain is a bargain.

Question ID : 630680385514  
Option 1 ID : 6306801502851  
Option 2 ID : 6306801502852  
Option 3 ID : 6306801502850  
Option 4 ID : 6306801502853  
Status : Answered  
Chosen Option : 2

**Comprehension:**

In the following passage some words have been deleted. Fill in the blanks with the help of the alternatives given. Select the most appropriate option for each number.

Alice had no idea (1) \_\_\_\_\_ to do, and in despair she put her hand in her pocket, and (2) \_\_\_\_\_ out a box of comfits, and handed them around as prizes. There was (3) \_\_\_\_\_ one a-piece all around.

**SubQuestion No : 20**

**Q.20** Select the most appropriate option to fill in the blank No. 2.

- Ans ☒ 1. squared  
☒ 2. crammed  
☒ 3. pushed  
☒ 4. pulled

Question ID : 630680385602  
Option 1 ID : 6306801503185  
Option 2 ID : 6306801503184  
Option 3 ID : 6306801503183  
Option 4 ID : 6306801503182  
Status : Answered  
Chosen Option : 4

**Comprehension:**

In the following passage some words have been deleted. Fill in the blanks with the help of the alternatives given. Select the most appropriate option for each number.

Alice had no idea (1) \_\_\_\_\_ to do, and in despair she put her hand in her pocket, and (2) \_\_\_\_\_ out a box of comfits, and handed them around as prizes. There was (3) \_\_\_\_\_ one a-piece all around.

**SubQuestion No : 21**

**Q.21** Select the most appropriate option to fill in the blank No. 1.

- Ans ☒ 1. how  
☒ 2. who  
☒ 3. why  
☒ 4. what

Question ID : 630680385601  
Option 1 ID : 6306801503179  
Option 2 ID : 6306801503178  
Option 3 ID : 6306801503180  
Option 4 ID : 6306801503181  
Status : Answered  
Chosen Option : 4

### Comprehension:

In the following passage some words have been deleted. Fill in the blanks with the help of the alternatives given. Select the most appropriate option for each number.

Alice had no idea (1) \_\_\_\_\_ to do, and in despair she put her hand in her pocket, and (2) \_\_\_\_\_ out a box of comfits, and handed them around as prizes. There was (3) \_\_\_\_\_ one a-piece all around.

#### SubQuestion No : 22

Q.22 Select the most appropriate option to fill in the blank No. 3.

- Ans ☒ 1. merely  
☒ 2. exactly  
☒ 3. not  
☒ 4. exact

Question ID : 630680385603  
Option 1 ID : 6306801503188  
Option 2 ID : 6306801503187  
Option 3 ID : 6306801503186  
Option 4 ID : 6306801503189  
Status : Answered  
Chosen Option : 1

Q.23 Select the word segment that substitutes (replaces) the bracketed word segment correctly and completes the sentence meaningfully. Select the option 'no correction required' if the sentence is correct as given.

As the period fixed (of our marriage comes nearer), whether from cowardice or a prophetic feeling, I felt my heart sink within me.

- Ans ☒ 1. of our marriage draws nearer  
☒ 2. No correction required.  
☒ 3. for our marriage drew nearer  
☒ 4. about our marriage draws near

Question ID : 630680385629  
Option 1 ID : 6306801503274  
Option 2 ID : 6306801503277  
Option 3 ID : 6306801503275  
Option 4 ID : 6306801503276  
Status : Answered  
Chosen Option : 3

Q.24 The sentences given below are all part of a paragraph but do not necessarily fall in the order that they are in. The first and the last sentences of the paragraph are given. Choose the option that arranges these sentences to form a meaningful paragraph.

Then I heard Atticus cough. I held my breath. Sometimes  
A. to sleep. I waited for his light to go on, straining  
B. we would find him reading. He said he often woke up  
C. during the night, checked on us, and read himself back  
D. when we made a midnight pilgrimage to the bathroom  
my eyes to see it flood the hall.

- Ans ☒ 1. CBAD  
☒ 2. DBCA  
☒ 3. ADCB  
☒ 4. BACD

Question ID : 630680385596  
Option 1 ID : 6306801503164  
Option 2 ID : 6306801503165  
Option 3 ID : 6306801503163  
Option 4 ID : 6306801503162  
Status : Answered  
Chosen Option : 2

Q.25 The sentences given below are all part of a paragraph but do not necessarily fall in the order that they are in. The first and the last sentences of the paragraph are given. Choose the option that arranges these sentences to form a meaningful paragraph.  
It was completely dark when I arrived in the environs  
A. and, as I was unable to rest, I resolved to visit the spot where  
B. distance of half a league from the city. The sky was serene;  
C. was obliged to pass the night at Secheron, a village at the  
D. of Geneva; the gates of the town were already shut; and I  
my poor William had been murdered.

- Ans ☒ 1. ADBC  
☒ 2. CADB  
☒ 3. DCBA  
☒ 4. BADC

Question ID : 630680385594

Option 1 ID : 6306801503156

Option 2 ID : 6306801503155

Option 3 ID : 6306801503154

Option 4 ID : 6306801503157

Status : Answered

Chosen Option : 3

