



Teachingninja.in



Latest Govt Job updates



Private Job updates



Free Mock tests available



Visit - teachingninja.in

DDA ASO

Previous Year Paper
08 Oct, 2023 Shift 1





DELHI DEVELOPMENT AUTHORITY
RECRUITMENT CELL
VIKAS SADAN, INA, NEW DELHI - 110023
(<https://www.dda.gov.in>)

Advertisement No. 02/2023/Recrt. Cell/Pers./DDA

Test Date	08/10/2023
Test Time	8:30 AM - 9:30 AM
Subject	Assistant Section Officer (ASO)

Section : General Intelligence and Reasoning

Q.1 In the following triad, each group of letters is related to the subsequent one following a certain logic.

INRXK - GLPVI - JOSYL

Which of the following option follows the same logic?

- Ans ☒ 1. KQCPW - MSERY - PVHUB
☒ 2. KQCPW - JPBOV - PVHUB
☒ 3. DHLPU - BFJNS - EIMQV
☒ 4. DHLPU - CGKOT - EIMQV

Question ID : 630680384593

Option 1 ID : 6306801499258

Option 2 ID : 6306801499259

Option 3 ID : 6306801499261

Option 4 ID : 6306801499260

Status : Answered

Chosen Option : 3

Q.2 Laurel introduces a man as the son of the brother of her mother. How is the man related to Laurel ?

- Ans ☒ 1. Son of mother's brother
☒ 2. Son
☒ 3. Father's brother
☒ 4. Brother's son

Question ID : 630680384572

Option 1 ID : 6306801499176

Option 2 ID : 6306801499175

Option 3 ID : 6306801499174

Option 4 ID : 6306801499177

Status : Answered

Chosen Option : 1

Q.3 In the following question three statements are given, followed by two conclusions numbered I and II. Assume three given statements to be true even if they seem to be at variance with commonly known facts and then decide which of the given conclusion logically follows from the two statements disregarding commonly known facts.

Statements:

- I. Some apples are bananas.
- II. Some bananas are oranges.
- III. All oranges are mangoes.

Conclusions:

- I. Some mangoes are bananas.
- II. Some mangoes are apples.

- Ans**
- ☒ 1. Both conclusions I and II follow
 - ☒ 2. Only conclusion II follows
 - ☒ 3. Only conclusion I follows
 - ☒ 4. Neither conclusion I nor II follows

Question ID : 630680386218

Option 1 ID : 6306801505584

Option 2 ID : 6306801505583

Option 3 ID : 6306801505582

Option 4 ID : 6306801505585

Status : Answered

Chosen Option : 3

Q.4 Find the wrong number in the series:

57, 114, 342, 1369, 6840

- Ans**
- ☒ 1. 1369
 - ☒ 2. 114
 - ☒ 3. 6840
 - ☒ 4. 342

Question ID : 630680384800

Option 1 ID : 6306801500088

Option 2 ID : 6306801500086

Option 3 ID : 6306801500089

Option 4 ID : 6306801500087

Status : Answered

Chosen Option : 1

Q.5 If banana is strawberry, strawberry is grapes, grapes is mango, mango is tomato, tomato is guava, which of the following is a pink fruit?

- Ans**
- ☒ 1. Strawberry
 - ☒ 2. Grapes
 - ☒ 3. Mango
 - ☒ 4. Guava

Question ID : 630680384577

Option 1 ID : 6306801499194

Option 2 ID : 6306801499197

Option 3 ID : 6306801499196

Option 4 ID : 6306801499195

Status : Answered

Chosen Option : 2

Q.6 In the following list of letters, how many I's are followed by L's but not preceded by E's ?
E I L I E L I E I E L E I L E S E L P I L E S S S E I L I L E I L E E E I L

- Ans
- ☒ 1. 2
 - ☐ 2. 3
 - ☐ 3. 1
 - ☐ 4. 0

Question ID : 630680384759
Option 1 ID : 6306801499925
Option 2 ID : 6306801499923
Option 3 ID : 6306801499922
Option 4 ID : 6306801499924
Status : Answered
Chosen Option : 1

Q.7 Select the option that is related to the fifth word in the same way as the fourth word is related to the third word and the second word is related to the first word.
AHMEDABAD : SARDAR VALLABHBHAI PATEL :: MUMBAI : CHHATRAPATI SHIVAJI :: KOLKATA : ?

- Ans
- ☐ 1. INDIRA GANDHI
 - ☐ 2. DR BABASAHEB AMBEDKAR
 - ☒ 3. NETAJI SUBHASH CHANDRA BOSE
 - ☐ 4. LAL BAHADUR SHASTRI

Question ID : 630680384691
Option 1 ID : 6306801499650
Option 2 ID : 6306801499651
Option 3 ID : 6306801499652
Option 4 ID : 6306801499653
Status : Answered
Chosen Option : 3

Q.8 Arrange the given words in the alphabetical order.

- 1. TRAIN
- 2. TRAM
- 3. TRICK
- 4. TREE
- 5. TRUMP

- Ans
- ☐ 1. 21345
 - ☐ 2. 21435
 - ☐ 3. 12345
 - ☒ 4. 12435

Question ID : 630680384648
Option 1 ID : 6306801499481
Option 2 ID : 6306801499479
Option 3 ID : 6306801499478
Option 4 ID : 6306801499480
Status : Answered
Chosen Option : 4

Q.9 Introducing a boy, a girl said, "he is my brother's wife's daughter's brother." How is that boy related to the girl?

- Ans** ☒ 1. Nephew
☐ 2. Uncle
☐ 3. Son
☐ 4. Father

Question ID : 630680384672
Option 1 ID : 6306801499576
Option 2 ID : 6306801499575
Option 3 ID : 6306801499574
Option 4 ID : 6306801499577
Status : Answered
Chosen Option : 1

Q.10 Five friends are standing in a row facing South such that Q is to the immediate right of P. S is between T and R. R is between Q and S. Who is sitting to the left of R?

- Ans** ☐ 1. P
☐ 2. T
☒ 3. Q
☐ 4. S

Question ID : 630680386207
Option 1 ID : 6306801505541
Option 2 ID : 6306801505540
Option 3 ID : 6306801505539
Option 4 ID : 6306801505538
Status : Answered
Chosen Option : 3

Q.11 In this question, a statement has been given followed by two courses of action numbered I and II. Assuming that all information in the statement is true, analyse the actions together and determine whether any of them logically and definitely follow(s) from the information given in the statement.

Statement: A state transport bus fell into a river, after meeting an accident over a bridge, resulting in the death of 50 people.

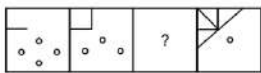
Courses of Action:

- I) The government should allocate funds to compensate for the loss.
II) The bridge should be banned and no transportation must be allowed for a month.

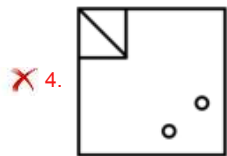
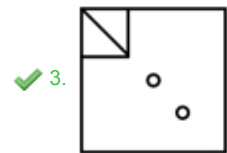
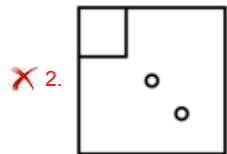
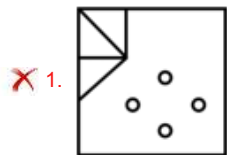
- Ans** ☐ 1. Neither I nor II follows
☐ 2. Both I and II follows
☐ 3. Only II follows
☒ 4. Only I follows

Question ID : 630680384486
Option 1 ID : 6306801498833
Option 2 ID : 6306801498832
Option 3 ID : 6306801498831
Option 4 ID : 6306801498830
Status : Answered
Chosen Option : 4

Q.12 The given figure consists of a series with a question mark. Find out the alternative for the question mark that completes the series from the given options.
Question figure:



Ans



Question ID : 630680386224
Option 1 ID : 6306801505608
Option 2 ID : 6306801505606
Option 3 ID : 6306801505607
Option 4 ID : 6306801505609
Status : Answered
Chosen Option : 3

Q.13 In the following question, four pairs of letter-cluster have been given out of which three are alike in some manner, while one is different. Select the odd pair from the given options.

- Ans
- ☒ 1. PYTC - RCZK
- ☒ 2. NBED - PFLl
- ☒ 3. WVUS - YZAA
- ☒ 4. GZHO - IDNW

Question ID : 630680384804
Option 1 ID : 6306801500102
Option 2 ID : 6306801500103
Option 3 ID : 6306801500104
Option 4 ID : 6306801500105
Status : Answered
Chosen Option : 2

Q.14 Ramya eats different foods namely Cake, Momos, Sushi, Patties, and Burger on five different days of a week from Monday to Friday. She eats Momos a day before she eats Patties. She eats Burger two days before she eats Sushi. She eats a Cake on Thursday. On which day does she eat Momos?

- Ans**
- ☒ 1. Friday
 - ☒ 2. Wednesday
 - ☒ 3. Monday
 - ☒ 4. Tuesday

Question ID : 630680384512
Option 1 ID : 6306801498937
Option 2 ID : 6306801498935
Option 3 ID : 6306801498936
Option 4 ID : 6306801498934
Status : Answered
Chosen Option : 3

Q.15 A series is given with one wrong term. Find out the wrong term.
E, G, J, M, S

- Ans**
- ☒ 1. J
 - ☒ 2. M
 - ☒ 3. S
 - ☒ 4. G

Question ID : 630680384822
Option 1 ID : 6306801500175
Option 2 ID : 6306801500174
Option 3 ID : 6306801500176
Option 4 ID : 6306801500177
Status : Answered
Chosen Option : 2

Q.16 In a certain code language, 'pit rob ret' means 'red and apple'; 'rob per pun' means 'apple tastes sweet'; and 'pit lit pun' means 'sweet and juicy'.
Which of the following represents 'juicy' in that code language?

- Ans**
- ☒ 1. lit
 - ☒ 2. pun
 - ☒ 3. ret
 - ☒ 4. rob

Question ID : 630680384583
Option 1 ID : 6306801499219
Option 2 ID : 6306801499221
Option 3 ID : 6306801499220
Option 4 ID : 6306801499218
Status : Answered
Chosen Option : 1

Q.17 If the positions of the first and the third digits within each number are interchanged, which of the following will be the first digit of the second-highest number?
521 367 293 412 615

- Ans**
- ☒ 1. 2
 - ☒ 2. 3
 - ☒ 3. 5
 - ☒ 4. 1

Question ID : **630680384450**
Option 1 ID : **6306801498687**
Option 2 ID : **6306801498689**
Option 3 ID : **6306801498688**
Option 4 ID : **6306801498686**
Status : **Answered**
Chosen Option : **3**

Q.18 '14-21-25-2' is related to 'nuyb' in the same way as '11-12-15-13' is related to:

- Ans**
- ☒ 1. klom
 - ☒ 2. klmo
 - ☒ 3. jmol
 - ☒ 4. jlmo

Question ID : **630680384794**
Option 1 ID : **6306801500065**
Option 2 ID : **6306801500064**
Option 3 ID : **6306801500063**
Option 4 ID : **6306801500062**
Status : **Answered**
Chosen Option : **1**

Q.19 In the following question three statements are given, followed by two conclusions numbered I and II. Assume three given statements to be true even if they seem to be at variance with commonly known facts and then decide which of the given conclusion logically follows from the two statements disregarding commonly known facts.
Statement:

All teachers are doctors.
All doctors are engineers.
All engineers are students.

Conclusions:

- I. Some students are teachers.
II. Some engineers are teachers.

- Ans**
- ☒ 1. If both conclusion I and II follows
 - ☒ 2. If neither conclusion I nor II follows
 - ☒ 3. If conclusion II follows
 - ☒ 4. If conclusion I follow

Question ID : **630680384830**
Option 1 ID : **6306801500208**
Option 2 ID : **6306801500209**
Option 3 ID : **6306801500207**
Option 4 ID : **6306801500206**
Status : **Answered**
Chosen Option : **1**


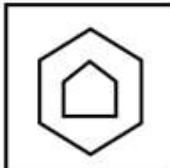
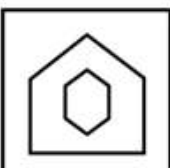
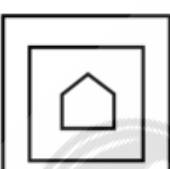
Q.20 Which of the following numbers will replace the question mark (?) in the given series?
33, 35, 105, 109, 545, ?

- Ans** ☒ 1. 551
☒ 2. 2504
☒ 3. 547
☒ 4. 2725

Question ID : 630680384665
Option 1 ID : 6306801499549
Option 2 ID : 6306801499547
Option 3 ID : 6306801499546
Option 4 ID : 6306801499548
Status : Answered
Chosen Option : 1

Q.21 Choose the figure which is different from the rest.

Ans

- ☒ 1. 
- ☒ 2. 
- ☒ 3. 
- ☒ 4. 

Question ID : 630680384542
Option 1 ID : 6306801499054
Option 2 ID : 6306801499056
Option 3 ID : 6306801499057
Option 4 ID : 6306801499055
Status : Answered
Chosen Option : 4

Q.22 Which of the following options is exactly the mirror image of the given word 'BLISS', if the mirror is placed vertically as shown?

B L I S S

Ans

- ✗ 1. S S I L B
- ✓ 2. S S I L B
- ✗ 3. B L I S S
- ✗ 4. B L I S S

Question ID : 630680384838

Option 1 ID : 6306801500240

Option 2 ID : 6306801500238

Option 3 ID : 6306801500241

Option 4 ID : 6306801500239

Status : Answered

Chosen Option : 2

Q.23 Four word pairs have been given, out of which three are alike in some manner and one is different. Select the odd word pair.

- ✗ 1. PAKISTAN : ISLAMABAD
- ✗ 2. CANADA : OTTAWA
- ✗ 3. FRANCE : PARIS
- ✓ 4. ITALY : TOKYO

Question ID : 630680384508

Option 1 ID : 6306801498920

Option 2 ID : 6306801498918

Option 3 ID : 6306801498919

Option 4 ID : 6306801498921

Status : Answered

Chosen Option : 4

Q.24 A series is given with one term missing (?). Select the correct alternative from the given ones that will complete the series.

H2J, K3N, O5T, U7B, C11N, ?

- ✗ 1. O13A
- ✓ 2. O13B
- ✗ 3. N12Z
- ✗ 4. N12A

Question ID : 630680384824

Option 1 ID : 6306801500183

Option 2 ID : 6306801500185

Option 3 ID : 6306801500182

Option 4 ID : 6306801500184

Status : Answered

Chosen Option : 2

Q.25 Given a number series, which alternative should be chosen to continue the same pattern and fill in the blank space.
4, 11, 30, 67, ____

- Ans** ☒ 1. 128
☐ 2. 106
☐ 3. 120
☐ 4. 95

Question ID : 630680384797
Option 1 ID : 6306801500076
Option 2 ID : 6306801500075
Option 3 ID : 6306801500074
Option 4 ID : 6306801500077
Status : Not Attempted and Marked For Review
Chosen Option : --

Section : General Awareness

Q.1 Who among the following won the first Nobel Prize in India in the year 1913 for literature?

- Ans** ☐ 1. Hargobind Khurana
☒ 2. Rabindranath Tagore
☐ 3. Mother Teresa
☐ 4. CV Raman

Question ID : 630680384270
Option 1 ID : 6306801497967
Option 2 ID : 6306801497968
Option 3 ID : 6306801497969
Option 4 ID : 6306801497966
Status : Answered
Chosen Option : 2

Q.2 हिमालय की सबसे उत्तरी श्रेणी को क्या कहा जाता है?

- Ans** ☐ 1. शिवालिक
☒ 2. हिमाद्री
☐ 3. लघु हिमालय
☐ 4. तिब्बती हिमालय

Question ID : 630680384303
Option 1 ID : 6306801498100
Option 2 ID : 6306801498098
Option 3 ID : 6306801498101
Option 4 ID : 6306801498099
Status : Answered
Chosen Option : 4

Q.3 Which of the following is an Autobiography of the famous Athlete of India, Milkha Singh?

- Ans ☒ 1. Playing it my way
☒ 2. The Race of my Life
☒ 3. Too Many Reasons to Live
☒ 4. Ace Against Odds

Question ID : 630680384263
Option 1 ID : 6306801497938
Option 2 ID : 6306801497941
Option 3 ID : 6306801497940
Option 4 ID : 6306801497939
Status : Answered
Chosen Option : 2

Q.4 Which of the following states in India has the largest coastline?

- Ans ☒ 1. Assam
☒ 2. Karnataka
☒ 3. Gujrat
☒ 4. Kerala

Question ID : 630680384308
Option 1 ID : 6306801498121
Option 2 ID : 6306801498118
Option 3 ID : 6306801498120
Option 4 ID : 6306801498119
Status : Answered
Chosen Option : 3

Q.5 डेरोजियो ने किस शहर में पढ़ाया और युवा बंगाल आंदोलन का नेतृत्व किया?

- Ans ☒ 1. कोलकाता
☒ 2. दार्जिलिंग
☒ 3. सिलीगुड़ी
☒ 4. दुर्गापुर

Question ID : 630680384226
Option 1 ID : 6306801497795
Option 2 ID : 6306801497797
Option 3 ID : 6306801497796
Option 4 ID : 6306801497794
Status : Not Answered
Chosen Option : --

Q.6 When did India celebrate its first republic day?

- Ans ☒ 1. August 15, 1950
☒ 2. January 26, 1950
☒ 3. August 15, 1947
☒ 4. January 26, 1947

Question ID : 630680384169
Option 1 ID : 6306801497567
Option 2 ID : 6306801497566
Option 3 ID : 6306801497569
Option 4 ID : 6306801497568
Status : Answered
Chosen Option : 2

Q.7 What is the interest rate on New savings scheme for women Mahila Samman Saving Certificate?

- Ans
- ☒ 1. 8%
 - ☒ 2. 6.9%
 - ☒ 3. 7.2%
 - ☒ 4. 7.5%

Question ID : 630680386404
Option 1 ID : 6306801506329
Option 2 ID : 6306801506327
Option 3 ID : 6306801506328
Option 4 ID : 6306801506326
Status : Not Answered
Chosen Option : --

Q.8 Which neighboring country of India is located in the Himalayan region and shares a significant cultural, historical, and geographical connection with India?

- Ans
- ☒ 1. Pakistan
 - ☒ 2. Maldives
 - ☒ 3. Bhutan
 - ☒ 4. Bangladesh

Question ID : 630680386447
Option 1 ID : 6306801506500
Option 2 ID : 6306801506501
Option 3 ID : 6306801506499
Option 4 ID : 6306801506498
Status : Answered
Chosen Option : 3

Q.9 Which nation has won SAFF Championship 2023 held in Bangalore?

- Ans
- ☒ 1. Kuwait
 - ☒ 2. Pakistan
 - ☒ 3. India
 - ☒ 4. Bhutan

Question ID : 630680386411
Option 1 ID : 6306801506354
Option 2 ID : 6306801506357
Option 3 ID : 6306801506355
Option 4 ID : 6306801506356
Status : Not Answered
Chosen Option : --

Q.10 Who won the men's hockey World Cup in 2023 held in India?

- Ans
- ☒ 1. Germany
 - ☒ 2. India
 - ☒ 3. Pakistan
 - ☒ 4. Belgium

Question ID : 630680386409
Option 1 ID : 6306801506346
Option 2 ID : 6306801506347
Option 3 ID : 6306801506349
Option 4 ID : 6306801506348
Status : Answered
Chosen Option : 4

Q.11 Who among the following American scientists made a groundbreaking discovery in climate science by being the first to recognize and understand the greenhouse effect and its impact on the Earth's climate whose 204th Birth Anniversary is celebrated?

- Ans
- ☒ 1. Mary C. Baltz
 - ☒ 2. Hans Bethe
 - ☒ 3. Raymond Arritt
 - ☒ 4. Eunice Newton Foote

Question ID : 630680384246
Option 1 ID : 6306801497872
Option 2 ID : 6306801497873
Option 3 ID : 6306801497870
Option 4 ID : 6306801497871
Status : Answered
Chosen Option : 2

Q.12 What was the literacy rate among women in India as per 2011 Census?

- Ans
- ☒ 1. 65.46
 - ☒ 2. 65.22
 - ☒ 3. 66.23
 - ☒ 4. 56.78

Question ID : 630680384313
Option 1 ID : 6306801498139
Option 2 ID : 6306801498141
Option 3 ID : 6306801498140
Option 4 ID : 6306801498138
Status : Answered
Chosen Option : 2

Q.13 Who was the first Non Congress Prime Minister of India?

- Ans
- ☒ 1. Indira Gandhi
 - ☒ 2. Morarji Desai
 - ☒ 3. Jawaharlal Nehru
 - ☒ 4. Mahatma Gandhi

Question ID : 630680384445
Option 1 ID : 6306801498669
Option 2 ID : 6306801498668
Option 3 ID : 6306801498666
Option 4 ID : 6306801498667
Status : Answered
Chosen Option : 2

Q.14 Which regulatory body is responsible for overseeing microfinance institutions in India?

- Ans
- ☒ 1. Reserve Bank of India
 - ☒ 2. Securities and Exchange Board of India
 - ☒ 3. National Bank for Agriculture and Rural Development
 - ☒ 4. Small Industries Development Bank of India

Question ID : 630680384407
Option 1 ID : 6306801498514
Option 2 ID : 6306801498515
Option 3 ID : 6306801498516
Option 4 ID : 6306801498517
Status : Answered
Chosen Option : 4

Q.15 Which among the following is the first University in India?

- Ans ☒ 1. Takshashila University
☒ 2. Banaras Hindu University
☒ 3. Nalanda University
☒ 4. University of Mysore

Question ID : 630680384280
Option 1 ID : 6306801498006
Option 2 ID : 6306801498008
Option 3 ID : 6306801498007
Option 4 ID : 6306801498009
Status : Answered
Chosen Option : 3

Q.16 In which year did the attack of Muhammad Bin Kassim take place?

- Ans ☒ 1. 867 AD
☒ 2. 1120 AD
☒ 3. 712 AD
☒ 4. 750 AD

Question ID : 630680384115
Option 1 ID : 6306801497352
Option 2 ID : 6306801497350
Option 3 ID : 6306801497351
Option 4 ID : 6306801497353
Status : Answered
Chosen Option : 3

Q.17 In which year was the Government of India Act passed?

- Ans ☒ 1. 1935
☒ 2. 1944
☒ 3. 1930
☒ 4. 1945

Question ID : 630680384332
Option 1 ID : 6306801498216
Option 2 ID : 6306801498217
Option 3 ID : 6306801498215
Option 4 ID : 6306801498214
Status : Answered
Chosen Option : 1

Q.18 When was the National Monetization Pipeline (MNP) launched by the Government of India?

- Ans ☒ 1. 2021
☒ 2. 2018
☒ 3. 2019
☒ 4. 2016

Question ID : 630680384294
Option 1 ID : 6306801498063
Option 2 ID : 6306801498065
Option 3 ID : 6306801498062
Option 4 ID : 6306801498064
Status : Not Answered
Chosen Option : --

Q.19 Which of the following is not the Current Social Issues in India 2023?

- Ans
- ☒ 1. Pollution
 - ☒ 2. Corruption
 - ☒ 3. Polio
 - ☒ 4. Overpopulation

Question ID : 630680386401
Option 1 ID : 6306801506316
Option 2 ID : 6306801506314
Option 3 ID : 6306801506317
Option 4 ID : 6306801506315
Status : Answered
Chosen Option : 3

Q.20 Which United Nations agency is responsible for publishing the Human Development Index (HDI) reports?

- Ans
- ☒ 1. World Health Organization (WHO)
 - ☒ 2. International Monetary Fund (IMF)
 - ☒ 3. United Nations Development Programme (UNDP)
 - ☒ 4. World Bank

Question ID : 630680386454
Option 1 ID : 6306801506529
Option 2 ID : 6306801506527
Option 3 ID : 6306801506528
Option 4 ID : 6306801506526
Status : Answered
Chosen Option : 1

Q.21 Which festival is celebrated by Christians in India to commemorate the birth of Jesus Christ?

- Ans
- ☒ 1. Christmas
 - ☒ 2. Onam
 - ☒ 3. Holi
 - ☒ 4. Eid

Question ID : 630680386430
Option 1 ID : 6306801506433
Option 2 ID : 6306801506432
Option 3 ID : 6306801506430
Option 4 ID : 6306801506431
Status : Answered
Chosen Option : 1

Q.22 Who was the founder of the Slave Dynasty?

- Ans
- ☒ 1. Qutb-ud-din Aibak
 - ☒ 2. Muhammad bin Tughluq
 - ☒ 3. Alauddin Khilji
 - ☒ 4. Iltutmish

Question ID : 630680386476
Option 1 ID : 6306801506617
Option 2 ID : 6306801506615
Option 3 ID : 6306801506614
Option 4 ID : 6306801506616
Status : Answered
Chosen Option : 1

Q.23 Which of the following factors is likely to result in an increase in production costs for a manufacturing company?

- Ans** ☒ 1. Increase in the wages of laborers
☐ 2. Technological advancements leading to improved efficiency
☐ 3. Expansion of the company's market share
☐ 4. Decrease in the cost of raw materials

Question ID : 630680386442
Option 1 ID : 6306801506481
Option 2 ID : 6306801506478
Option 3 ID : 6306801506480
Option 4 ID : 6306801506479
Status : Answered
Chosen Option : 1

Q.24 From which space center Chandrayaan-3 got launched?

- Ans** ☐ 1. Vikram Sarabhai Space Centre
☐ 2. Liquid Propulsion Systems Centre
☒ 3. Satish Dhawan Space Centre in Sriharikota
☐ 4. U R Rao Satellite Centre

Question ID : 630680386392
Option 1 ID : 6306801506278
Option 2 ID : 6306801506281
Option 3 ID : 6306801506279
Option 4 ID : 6306801506280
Status : Answered
Chosen Option : 3

Q.25 Which is the coldest place in India as per 2022?

- Ans** ☐ 1. Leh
☐ 2. Auli
☐ 3. Rohtang Pass
☒ 4. Dras

Question ID : 630680384432
Option 1 ID : 6306801498617
Option 2 ID : 6306801498615
Option 3 ID : 6306801498614
Option 4 ID : 6306801498616
Status : Answered
Chosen Option : 1

Section : Quantitative Aptitude

Q.1 Find the value of 99^3 .

Ans ☒ 1. 970299

☒ 2. 970399

☒ 3. 970599

☒ 4. 970499

Question ID : 630680401778

Option 1 ID : 6306801566882

Option 2 ID : 6306801566883

Option 3 ID : 6306801566885

Option 4 ID : 6306801566884

Status : Answered

Chosen Option : 1

Q.2 Simplify:

$$[\{ 2 \times (8 \times 2 - 5 \times 4) + 30 \} \div 2]$$

Ans ☒ 1. 11

☒ 2. 44

☒ 3. 22

☒ 4. 33

Question ID : 630680401808

Option 1 ID : 6306801567002

Option 2 ID : 6306801567005

Option 3 ID : 6306801567003

Option 4 ID : 6306801567004

Status : Answered

Chosen Option : 1

Q.3 If one pair of opposite sides are parallel in a quadrilateral , it is called _____.

Ans ☒ 1. trapezium

☒ 2. parallelogram

☒ 3. rectangle

☒ 4. square

Question ID : 630680401826

Option 1 ID : 6306801567076

Option 2 ID : 6306801567074

Option 3 ID : 6306801567077

Option 4 ID : 6306801567075

Status : Answered

Chosen Option : 1

Q.4 The selling price of 20 eggs is equal to the cost price of 15 eggs. Find the loss percent.

- Ans ☒ 1. 25%
- ☐ 2. 35%
- ☐ 3. 20%
- ☐ 4. 30%

Question ID : 630680401832
Option 1 ID : 6306801567099
Option 2 ID : 6306801567101
Option 3 ID : 6306801567098
Option 4 ID : 6306801567100
Status : Answered
Chosen Option : 1

Q.5 Compare the ratios 1:3 and 7:4. Which of the ratios is greater ?

- Ans ☐ 1. 1:3
- ☒ 2. 7:4
- ☐ 3. Both are equal.
- ☐ 4. None of these

Question ID : 630680401835
Option 1 ID : 6306801567110
Option 2 ID : 6306801567111
Option 3 ID : 6306801567112
Option 4 ID : 6306801567113
Status : Answered
Chosen Option : 2

Q.6 Two parallel lines are intersected by a transversal, then which option is incorrect?

- Ans ☐ 1. Each pair of corresponding angles are equal.
- ☒ 2.
Each pair of interior angles on the same side of the transversal are complementary.
- ☐ 3.
Each pair of interior angles on the same side of the transversal are supplementary.
- ☐ 4. Each pair of alternate interior angles are equal.

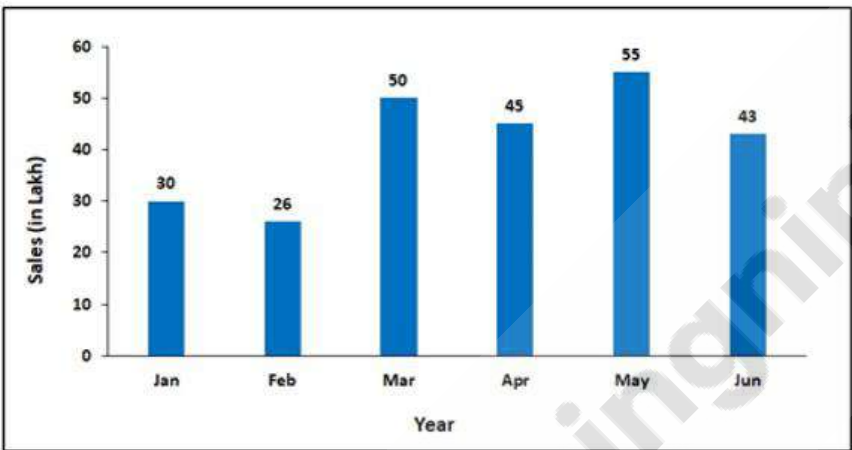
Question ID : 630680401825
Option 1 ID : 6306801567071
Option 2 ID : 6306801567073
Option 3 ID : 6306801567072
Option 4 ID : 6306801567070
Status : Answered
Chosen Option : 2

Q.7 The Monthly pocket money of Rohan increased from ₹5000 to ₹6000. Find the percentage increase.

- Ans
- ☐ 1. 30%
 - ☐ 2. 40%
 - ☐ 3. 10%
 - ☒ 4. 20%

Question ID : 630680401814
Option 1 ID : 6306801567028
Option 2 ID : 6306801567029
Option 3 ID : 6306801567026
Option 4 ID : 6306801567027
Status : Answered
Chosen Option : 4

Q.8 In which month the least sales occurred ?



- Ans
- ☐ 1. Jun
 - ☐ 2. Jan
 - ☐ 3. Apr
 - ☒ 4. Feb

Question ID : 630680401793
Option 1 ID : 6306801566943
Option 2 ID : 6306801566942
Option 3 ID : 6306801566944
Option 4 ID : 6306801566945
Status : Answered
Chosen Option : 4

Q.9 A fruit seller purchase the mangoes for ₹100/kg and sell them for ₹120/kg. Calculate gain or loss percentage.

- Ans
- ☐ 1. 30%
 - ☒ 2. 20%
 - ☐ 3. 40%
 - ☐ 4. 10%

Question ID : 630680401829
Option 1 ID : 6306801567088
Option 2 ID : 6306801567087
Option 3 ID : 6306801567089
Option 4 ID : 6306801567086
Status : Answered
Chosen Option : 2

Q.10 Study the following table and answer that what percentage of total number of students passed in mathematics ?

Subject	Passed Students
Mathematics	40
Science	52
English	59
Hindi	60
Social Science	55

- Ans
- ☒ 1. 77.77%
 - ☒ 2. 88.88%
 - ☒ 3. 66.66%
 - ☒ 4. 99.99%

Question ID : 630680401790
Option 1 ID : 6306801566931
Option 2 ID : 6306801566932
Option 3 ID : 6306801566930
Option 4 ID : 6306801566933
Status : Answered
Chosen Option : 3

Q.11 If $a^3 + b^3 = 36$ and $(a+b) = 6$. what is the value of $(a^2 - ab + b^2)$?

- Ans
- ☒ 1. 6
 - ☒ 2. $-\frac{1}{6}$
 - ☒ 3. $\frac{1}{6}$
 - ☒ 4. -6

Question ID : 630680401775
Option 1 ID : 6306801566870
Option 2 ID : 6306801566873
Option 3 ID : 6306801566872
Option 4 ID : 6306801566871
Status : Answered
Chosen Option : 1

Q.12 If two pipes X and Y running together, to fill a tank in 6 minutes. If X takes time 5 minutes less than the time taken by Y, then what will be the time taken by Y alone to fill the tank ?

- Ans
- ☒ 1. 5 min.
 - ☒ 2. 20 min.
 - ☒ 3. 15 min.
 - ☒ 4. 10 min.

Question ID : 630680401844
Option 1 ID : 6306801567146
Option 2 ID : 6306801567149
Option 3 ID : 6306801567148
Option 4 ID : 6306801567147
Status : Answered
Chosen Option : 3

Q.13 Rohan can do a work in 50 days and Rudra in 60 days. If they work on it together for 10 days, then what will be the fraction of left work ?

- Ans
- ☒ 1. $\frac{19}{300}$
 - ☒ 2. $\frac{17}{30}$
 - ☒ 3. $\frac{19}{30}$
 - ☒ 4. $\frac{17}{300}$

Question ID : 630680401841
Option 1 ID : 6306801567134
Option 2 ID : 6306801567137
Option 3 ID : 6306801567136
Option 4 ID : 6306801567135
Status : Answered
Chosen Option : 3

Q.14 If the average of marks of 20 students is 78 and sum of marks of 19 students 1500. Find the marks of 20th student.

- Ans
- ☒ 1. 60
 - ☒ 2. 65
 - ☒ 3. 70
 - ☒ 4. 76

Question ID : 630680401784
Option 1 ID : 6306801566906
Option 2 ID : 6306801566907
Option 3 ID : 6306801566908
Option 4 ID : 6306801566909
Status : Answered
Chosen Option : 1

Q.15 20 circular plates are stacked, formed a right circular cylinder. Radius and thickness of each plate are 6 cm and 0.7 cm respectively. Find its total surface area.

- Ans
- ☒ 1. 754.29 cm²
 - ☒ 2. 754 cm²
 - ☒ 3. 755.29 cm²
 - ☒ 4. 755 cm²

Question ID : 630680401805
Option 1 ID : 6306801566991
Option 2 ID : 6306801566992
Option 3 ID : 6306801566993
Option 4 ID : 6306801566990
Status : Answered
Chosen Option : 1

Q.16 A line that cuts the circle at the two distinct points is known as _____.

- Ans
- ☒ 1. the secant
 - ☐ 2. the diameter
 - ☐ 3. the chord
 - ☐ 4. the tangent

Question ID : 630680401821
Option 1 ID : 6306801567054
Option 2 ID : 6306801567057
Option 3 ID : 6306801567055
Option 4 ID : 6306801567056
Status : Answered
Chosen Option : 3

Q.17 A hemispherical bowl made of brass has inner radius 5 cm. Find the cost of tin plating it on the inside at the rate of ₹5 per 100 cm².

- Ans
- ☐ 1. Rs. 8.85
 - ☐ 2. Rs. 5.85
 - ☐ 3. Rs.6.85
 - ☒ 4. Rs.7.85

Question ID : 630680401800
Option 1 ID : 6306801566973
Option 2 ID : 6306801566970
Option 3 ID : 6306801566971
Option 4 ID : 6306801566972
Status : Answered
Chosen Option : 4

Q.18 Find the value, $\{-(\sin x)^2 - (\cos x)^2 + 1\} (\operatorname{cosec} x)^2$

- Ans
- ☐ 1. $(\operatorname{cosec} x)^2$
 - ☐ 2. $-(\operatorname{cosec} x)^2$
 - ☐ 3. 1
 - ☒ 4. 0

Question ID : 630680401848
Option 1 ID : 6306801567164
Option 2 ID : 6306801567165
Option 3 ID : 6306801567163
Option 4 ID : 6306801567162
Status : Answered
Chosen Option : 4

Q.19 The price of a watch is ₹5000 last year. The price of watch is increased by 10% this year. What is the price of watch?

- Ans
- ☒ 1. ₹5200
 - ☒ 2. ₹5400
 - ☒ 3. ₹5500
 - ☒ 4. ₹5300

Question ID : 630680401818
Option 1 ID : 6306801567042
Option 2 ID : 6306801567044
Option 3 ID : 6306801567045
Option 4 ID : 6306801567043
Status : Answered
Chosen Option : 3

Q.20 Simplify:

$$\{(3x + 10y - z)(30xy - 10yz - 3zx + 9x^2 + 100y^2 + z^2)\}$$

- Ans
- ☒ 1. $27x^3 + 1000y^3 + z^3 + 90xyz$
 - ☒ 2. $27x^3 + 1000y^3 + z^3 - 90xyz$
 - ☒ 3. $27x^3 + 1000y^3 - z^3 - 90xyz$
 - ☒ 4. $27x^3 + 1000y^3 - z^3 + 90xyz$

Question ID : 630680401781
Option 1 ID : 6306801566895
Option 2 ID : 6306801566897
Option 3 ID : 6306801566896
Option 4 ID : 6306801566894
Status : Answered
Chosen Option : 3

Q.21 In a mixture of 80 litres, the ratio of milk and water 2:3. If this ratio is to be 1:2, then what quantity of water to be added in the mixture ?

- Ans
- ☒ 1. 16 litres
 - ☒ 2. 17 litres
 - ☒ 3. 18 litres
 - ☒ 4. 15 litres

Question ID : 630680401839
Option 1 ID : 6306801567127
Option 2 ID : 6306801567128
Option 3 ID : 6306801567129
Option 4 ID : 6306801567126
Status : Answered
Chosen Option : 1

Q.22 If radius of a circle is 4 cm. Find the perimeter of the circle.

- Ans ☒ 1. $4(\pi+2)$ cm
☐ 2. $(\pi+4)$ cm
☐ 3. $2(\pi+2)$ cm
☐ 4. $(\pi+2)$ cm

Question ID : 630680401797

Option 1 ID : 6306801566958

Option 2 ID : 6306801566961

Option 3 ID : 6306801566960

Option 4 ID : 6306801566959

Status : Not Attempted and
Marked For Review

Chosen Option : --

Q.23 Calculate the average speed for the two rounds assuming that 30 m/s was the speed for one round and 60 m/s for the second round.

- Ans ☒ 1. 40 m/s
☐ 2. 55 m/s
☐ 3. 50 m/s
☐ 4. 45 m/s

Question ID : 630680401786

Option 1 ID : 6306801566914

Option 2 ID : 6306801566917

Option 3 ID : 6306801566916

Option 4 ID : 6306801566915

Status : Answered

Chosen Option : 1

Q.24 The slant height and the radius of a cone are in ratio 3:4. If the curved surface area of the cone is 982 cm^2 , find the radius of the cone.

- Ans ☐ 1. 21 cm
☒ 2. 20.4 cm
☐ 3. 20 cm
☐ 4. 21.4 cm

Question ID : 630680401802

Option 1 ID : 6306801566979

Option 2 ID : 6306801566978

Option 3 ID : 6306801566980

Option 4 ID : 6306801566981

Status : Answered

Chosen Option : 2

Q.25 Find the value of 'n',

$$\sqrt[3]{7^{\frac{n}{2}}} = 343$$

- Ans
- ☐ 1. 14
 - ☐ 2. 12
 - ☐ 3. 16
 - ☒ 4. 18

Question ID : 630680401811
Option 1 ID : 6306801567015
Option 2 ID : 6306801567014
Option 3 ID : 6306801567016
Option 4 ID : 6306801567017
Status : Answered
Chosen Option : 4

Section : English Comprehension

Comprehension:

Read the passage carefully and choose the best answer to each question out of the four alternatives.

Abraham Lincoln, the 16th President of the United States, was a man of humble beginnings who rose to become one of America's most iconic leaders. Born in a log cabin in Kentucky in 1809, he experienced hardship and limited formal education. Despite this, he was an avid reader and largely self-taught.

Lincoln's life took a significant turn when he entered politics, winning a seat in the Illinois state legislature. His eloquence and moral integrity propelled him further, and in 1860, he was elected President during a tumultuous period of American history - just before the outbreak of the Civil War.

Throughout his presidency, Lincoln faced immense challenges, struggling to preserve the Union and abolish slavery. His unwavering determination and remarkable leadership guided the nation through its darkest hours. His most enduring legacy was the Emancipation Proclamation in 1863, which paved the way for the abolition of slavery.

Sadly, Abraham Lincoln's life was cut short when he was assassinated in 1865, just days after the Civil War ended. His vision of a united and equal America, however, continues to inspire generations, making him an indelible figure in the annals of history.

SubQuestion No : 1

Q.1 What tone does the passage adopt when describing Abraham Lincoln?

- Ans
- ☐ 1. Detached and Objective
 - ☒ 2. Admiring and Reverential
 - ☐ 3. Critical and Analytical
 - ☐ 4. Compassionate and Sympathetic

Question ID : 630680385750
Option 1 ID : 6306801503729
Option 2 ID : 6306801503728
Option 3 ID : 6306801503726
Option 4 ID : 6306801503727
Status : Answered
Chosen Option : 2

Comprehension:

Read the passage carefully and choose the best answer to each question out of the four alternatives.

Abraham Lincoln, the 16th President of the United States, was a man of humble beginnings who rose to become one of America's most iconic leaders. Born in a log cabin in Kentucky in 1809, he experienced hardship and limited formal education. Despite this, he was an avid reader and largely self-taught.

Lincoln's life took a significant turn when he entered politics, winning a seat in the Illinois state legislature. His eloquence and moral integrity propelled him further, and in 1860, he was elected President during a tumultuous period of American history - just before the outbreak of the Civil War.

Throughout his presidency, Lincoln faced immense challenges, struggling to preserve the Union and abolish slavery. His unwavering determination and remarkable leadership guided the nation through its darkest hours. His most enduring legacy was the Emancipation Proclamation in 1863, which paved the way for the abolition of slavery.

Sadly, Abraham Lincoln's life was cut short when he was assassinated in 1865, just days after the Civil War ended. His vision of a united and equal America, however, continues to inspire generations, making him an indelible figure in the annals of history.

SubQuestion No : 2

Q.2 Which statement connects Abraham Lincoln's life to the world?

- Ans** ☒ 1. Abraham Lincoln's vision of a united and equal America continues to inspire generations worldwide.
- ☒ 2. Abraham Lincoln's early struggles in a log cabin shaped his moral integrity and eloquence.
- ☒ 3. The Emancipation Proclamation paved the way for the abolition of slavery in America.
- ☒ 4. Abraham Lincoln was elected as the 16th President of the United States in 1860.

Question ID : 630680385749

Option 1 ID : 6306801503722

Option 2 ID : 6306801503724

Option 3 ID : 6306801503725

Option 4 ID : 6306801503723

Status : Not Answered

Chosen Option : --



Comprehension:

Read the passage carefully and choose the best answer to each question out of the four alternatives.

Abraham Lincoln, the 16th President of the United States, was a man of humble beginnings who rose to become one of America's most iconic leaders. Born in a log cabin in Kentucky in 1809, he experienced hardship and limited formal education. Despite this, he was an avid reader and largely self-taught. Lincoln's life took a significant turn when he entered politics, winning a seat in the Illinois state legislature. His eloquence and moral integrity propelled him further, and in 1860, he was elected President during a tumultuous period of American history - just before the outbreak of the Civil War. Throughout his presidency, Lincoln faced immense challenges, struggling to preserve the Union and abolish slavery. His unwavering determination and remarkable leadership guided the nation through its darkest hours. His most enduring legacy was the Emancipation Proclamation in 1863, which paved the way for the abolition of slavery. Sadly, Abraham Lincoln's life was cut short when he was assassinated in 1865, just days after the Civil War ended. His vision of a united and equal America, however, continues to inspire generations, making him an indelible figure in the annals of history.

SubQuestion No : 3

Q.3 What is the central theme of the passage?

- Ans ☒ 1. Abraham Lincoln's Impact on American History
- ☒ 2. Abraham Lincoln's Early Struggles and Education
- ☒ 3. The Legacy of Abraham Lincoln's Leadership
- ☒ 4. The Civil War and Slavery Abolition

Question ID : 630680385748
Option 1 ID : 6306801503721
Option 2 ID : 6306801503718
Option 3 ID : 6306801503719
Option 4 ID : 6306801503720
Status : Answered
Chosen Option : 3

Comprehension:

Read the passage carefully and choose the best answer to each question out of the four alternatives.

Abraham Lincoln, the 16th President of the United States, was a man of humble beginnings who rose to become one of America's most iconic leaders. Born in a log cabin in Kentucky in 1809, he experienced hardship and limited formal education. Despite this, he was an avid reader and largely self-taught. Lincoln's life took a significant turn when he entered politics, winning a seat in the Illinois state legislature. His eloquence and moral integrity propelled him further, and in 1860, he was elected President during a tumultuous period of American history - just before the outbreak of the Civil War. Throughout his presidency, Lincoln faced immense challenges, struggling to preserve the Union and abolish slavery. His unwavering determination and remarkable leadership guided the nation through its darkest hours. His most enduring legacy was the Emancipation Proclamation in 1863, which paved the way for the abolition of slavery. Sadly, Abraham Lincoln's life was cut short when he was assassinated in 1865, just days after the Civil War ended. His vision of a united and equal America, however, continues to inspire generations, making him an indelible figure in the annals of history.

SubQuestion No : 4

Q.4 Which of the following titles best represents the passage?

- Ans ☒ 1. "The Life and Achievements of Abraham Lincoln"
- ☒ 2. "From Log Cabin to Presidency: The Story of Abraham Lincoln"
- ☒ 3. "The Impact of Abraham Lincoln on American History"
- ☒ 4. "Abraham Lincoln's Political Journey and Legacy"

Question ID : 630680385747
Option 1 ID : 6306801503714
Option 2 ID : 6306801503715
Option 3 ID : 6306801503717
Option 4 ID : 6306801503716
Status : Answered
Chosen Option : 4

Q.5 Select the word from the options which is exactly opposite in meaning to the bracketed word given in the sentence below.
Steam or griddle your tortillas until they're soft and (pliable).

- Ans ☒ 1. docile
☒ 2. slippery
☒ 3. powdered
☒ 4. stiff

Question ID : 630680385651
Option 1 ID : 6306801503362
Option 2 ID : 6306801503365
Option 3 ID : 6306801503363
Option 4 ID : 6306801503364
Status : Answered
Chosen Option : 4

Q.6 Select the most appropriate antonym of the given word.
Loiter

- Ans ☒ 1. Sensitive
☒ 2. Hygienic
☒ 3. Hurry
☒ 4. Unlikely

Question ID : 630680385646
Option 1 ID : 6306801503345
Option 2 ID : 6306801503343
Option 3 ID : 6306801503344
Option 4 ID : 6306801503342
Status : Answered
Chosen Option : 2

Q.7 Fill in the blank with the most appropriate option.
They aren't pursuing MBA, _____?

- Ans ☒ 1. weren't they
☒ 2. were they
☒ 3. are they
☒ 4. aren't they

Question ID : 630680385344
Option 1 ID : 6306801502229
Option 2 ID : 6306801502227
Option 3 ID : 6306801502226
Option 4 ID : 6306801502228
Status : Answered
Chosen Option : 3

Q.8 The statement below has been given with bracketed text. Select the option with correct Idiom for the bracketed text.
I probably (said it before it was the right time) with announcing our engagement before everyone was there.

- Ans
- ☒ 1. hit the hay
 - ☒ 2. went bananas
 - ☒ 3. jumped the gun
 - ☒ 4. jumped off the deep end

Question ID : 630680385642
Option 1 ID : 6306801503327
Option 2 ID : 6306801503328
Option 3 ID : 6306801503326
Option 4 ID : 6306801503329
Status : Answered
Chosen Option : 1

Q.9 Arrange the following sentences in the correct order to form a coherent paragraph:
As the sun set, the atmosphere around the campfire became enchanting.
A. The children gathered around the storyteller, eagerly awaiting the tale.
B.The old book was filled with fascinating stories from different cultures.
C.With animated gestures and expressive voice, the storyteller began to narrate.
D.Each story transported the listeners to far-off lands and mystical realms.
The storytelling session continued late into the night, leaving a lasting impression on the young minds.

- Ans
- ☒ 1. ABCD
 - ☒ 2. CABD
 - ☒ 3. BCAD
 - ☒ 4. DBAC

Question ID : 630680385692
Option 1 ID : 6306801503510
Option 2 ID : 6306801503511
Option 3 ID : 6306801503513
Option 4 ID : 6306801503512
Status : Not Attempted and Marked For Review
Chosen Option : --

Q.10 Select the missing sentence that would logically fill in the blank:
Honey bees play a vital role in pollination. They are responsible for transferring pollen between flowers, which leads to fertilization and the production of fruits and seeds_____. However, honey bees worldwide are facing serious threats. Pesticides, habitat loss, and diseases are some of the factors contributing to their decline. To protect these crucial pollinators, we need to take immediate action.

- Ans
- ☒ 1. Honey bees produce delicious honey that we can enjoy.
 - ☒ 2. Many people are allergic to bee stings.
 - ☒ 3. Some people keep honey bees as a hobby.
 - ☒ 4. Without pollination, many plant species would disappear.

Question ID : 630680385689
Option 1 ID : 6306801503498
Option 2 ID : 6306801503499
Option 3 ID : 6306801503501
Option 4 ID : 6306801503500
Status : Answered
Chosen Option : 1

Q.11 The sentences given below are all part of a paragraph but do not necessarily fall in the order that they are in. The first and the last sentences of the paragraph are given. Choose the option that arranges these sentences to form a meaningful paragraph. In her transport at finding such treasures, Heidi even forgot Peter and his goats. She ran far ahead of him and then strayed away off to one side, for the sparkling flowers tempted her here and there. Picking whole bunches of them to take home with her, _____.

- Ans**
- ☒ 1. madame Karenina seated herself in the carriage.
 - ☒ 2. she put them all into her little apron.
 - ☒ 3. she did see him, and she knew me.
 - ☒ 4. she will be weary waiting for us.

Question ID : 630680385599
Option 1 ID : 6306801503177
Option 2 ID : 6306801503175
Option 3 ID : 6306801503176
Option 4 ID : 6306801503174
Status : Answered
Chosen Option : 2

Q.12 Select the word segment that substitutes the bracketed segment correctly and completes the sentence meaningfully. The chef's culinary skills were exceptional; he prepared the dish with [meticulous attention to detail], making it a true work of art.

- Ans**
- ☒ 1. careless disregard for precision
 - ☒ 2. a haphazard and chaotic approach
 - ☒ 3. little to no effort
 - ☒ 4. great care and precision

Question ID : 630680385721
Option 1 ID : 6306801503614
Option 2 ID : 6306801503615
Option 3 ID : 6306801503616
Option 4 ID : 6306801503617
Status : Answered
Chosen Option : 4

Q.13 Select the word segment that substitutes the bracketed segment correctly and completes the sentence meaningfully. The novel's plot was captivating; it had an [intriguing and unexpected] twist that left readers astonished.

- Ans**
- ☒ 1. dull and lifeless
 - ☒ 2. exaggerated and unrealistic
 - ☒ 3. anticipated and mundane
 - ☒ 4. exciting and enthralling

Question ID : 630680385725
Option 1 ID : 6306801503633
Option 2 ID : 6306801503632
Option 3 ID : 6306801503630
Option 4 ID : 6306801503631
Status : Answered
Chosen Option : 4

Q.14 Select the most appropriate synonym to substitute the bracketed word in the given sentence.

The protestors formed a (rabble) outside the government building, demanding change.

Ans ✓ 1. Assemblage

✗ 2. Priest

✗ 3. Quiet

✗ 4. Noisy

Question ID : 630680385534

Option 1 ID : 6306801502930

Option 2 ID : 6306801502933

Option 3 ID : 6306801502931

Option 4 ID : 6306801502932

Status : Answered

Chosen Option : 1

Q.15 What is the one-word term used to describe:
"The study of ancient societies and civilizations."

Ans ✗ 1. Palaeontology

✗ 2. Sociology

✓ 3. Archaeology

✗ 4. Anthropology

Question ID : 630680385718

Option 1 ID : 6306801503603

Option 2 ID : 6306801503605

Option 3 ID : 6306801503604

Option 4 ID : 6306801503602

Status : Answered

Chosen Option : 4

Q.16 What does the proverb "A city that parleys is half gotten" mean?

Ans ✗ 1. A city that is large and prosperous is more valuable.

✗ 2. A city that is divided in half is easier to conquer.

✗ 3. A city that is well-fortified is difficult to capture.

✓ 4. A city that negotiates is halfway towards achieving its goals.

Question ID : 630680385516

Option 1 ID : 6306801502861

Option 2 ID : 6306801502858

Option 3 ID : 6306801502860

Option 4 ID : 6306801502859

Status : Answered

Chosen Option : 2

Q.17 Select the most appropriate synonym of the given word.
Verbose

- Ans ☒ 1. Alienate
☒ 2. Babbling
☒ 3. Succinct
☒ 4. Laconic

Question ID : 630680385533
Option 1 ID : 6306801502928
Option 2 ID : 6306801502926
Option 3 ID : 6306801502927
Option 4 ID : 6306801502929
Status : Answered
Chosen Option : 2

Q.18 Fill in the blank with the most appropriate option.
She completed the project on time. _____, she received praise from her manager.

- Ans ☒ 1. Likewise
☒ 2. Consequently
☒ 3. Conversely
☒ 4. Furthermore

Question ID : 630680385470
Option 1 ID : 6306801502696
Option 2 ID : 6306801502694
Option 3 ID : 6306801502697
Option 4 ID : 6306801502695
Status : Answered
Chosen Option : 2

Q.19 Identify the one-word substitution in the following sentence:
"Sarah has an irrational fear of heights."

- Ans ☒ 1. Acrophobia
☒ 2. Claustrophobia
☒ 3. Hydrophobia
☒ 4. Arachnophobia

Question ID : 630680385716
Option 1 ID : 6306801503594
Option 2 ID : 6306801503595
Option 3 ID : 6306801503597
Option 4 ID : 6306801503596
Status : Answered
Chosen Option : 1

Q.20 What is the one-word term used to describe:
"A recess in the wall of a room or garden."

- Ans
- ☒ 1. Vestibule
 - ☒ 2. Sanctuary
 - ☒ 3. Terrace
 - ☒ 4. Alcove

Question ID : 630680385722
Option 1 ID : 6306801503620
Option 2 ID : 6306801503618
Option 3 ID : 6306801503621
Option 4 ID : 6306801503619
Status : Answered
Chosen Option : 4

Q.21 Please select the most suitable phrasal verb from the options provided to fill in the blank.
The chef _____ the new recipe for the restaurant's menu, and it became an instant hit among the customers.

- Ans
- ☒ 1. brought out
 - ☒ 2. brought off
 - ☒ 3. brought about
 - ☒ 4. brought in

Question ID : 630680385454
Option 1 ID : 6306801502631
Option 2 ID : 6306801502632
Option 3 ID : 6306801502630
Option 4 ID : 6306801502633
Status : Answered
Chosen Option : 4

Comprehension:

In the following passage some words have been deleted. Fill in the blanks with the help of the alternatives given. Select the most appropriate option for each number.

The Magadhan soldier (1) _____ his sword, ready to strike. Suddenly, the Naga (2) _____ from the cover of the trees, his hand holding a knife high. (3) _____ the soldier knew what had happened, the knife struck his hand and his sword dropped harmlessly to the ground.

SubQuestion No : 22

Q.22 Select the most appropriate option to fill in the blank No. 3.

- Ans
- ☒ 1. After
 - ☒ 2. As
 - ☒ 3. Before
 - ☒ 4. At par

Question ID : 630680385607
Option 1 ID : 6306801503198
Option 2 ID : 6306801503199
Option 3 ID : 6306801503201
Option 4 ID : 6306801503200
Status : Answered
Chosen Option : 3

Comprehension:


In the following passage some words have been deleted. Fill in the blanks with the help of the alternatives given. Select the most appropriate option for each number.

The Magadhan soldier (1) _____ his sword, ready to strike. Suddenly, the Naga (2) _____ from the cover of the trees, his hand holding a knife high. (3) _____ the soldier knew what had happened, the knife struck his hand and his sword dropped harmlessly to the ground.


SubQuestion No : 23

Q.23 Select the most appropriate option to fill in the blank No. 1.

Ans  1. raised

 2. lowered

 3. strike

 4. bought

Question ID : 630680385605

Option 1 ID : 6306801503192

Option 2 ID : 6306801503190

Option 3 ID : 6306801503193

Option 4 ID : 6306801503191

Status : Answered

Chosen Option : 1

Comprehension:

In the following passage some words have been deleted. Fill in the blanks with the help of the alternatives given. Select the most appropriate option for each number.


The Magadhan soldier (1) _____ his sword, ready to strike. Suddenly, the Naga (2) _____ from the cover of the trees, his hand holding a knife high. (3) _____ the soldier knew what had happened, the knife struck his hand and his sword dropped harmlessly to the ground.

SubQuestion No : 24

Q.24 Select the most appropriate option to fill in the blank No. 2.

Ans  1. fall back

 2. broke down

 3. call out

 4. broke out

Question ID : 630680385606

Option 1 ID : 6306801503197

Option 2 ID : 6306801503195

Option 3 ID : 6306801503196

Option 4 ID : 6306801503194

Status : Answered

Chosen Option : 4

Q.25 Fill in the blank with the appropriate interjection:
_____, that was an incredible performance!

Ans ☒ 1. Bravo

☐ 2. But

☐ 3. Oops

☐ 4. Hey

Question ID : 630680385450

Option 1 ID : 6306801502615

Option 2 ID : 6306801502617

Option 3 ID : 6306801502614

Option 4 ID : 6306801502616

Status : Answered

Chosen Option : 1



Teachingninja.in