



Teachingninja.in



Latest Govt Job updates



Private Job updates



Free Mock tests available



Visit - teachingninja.in

DDA ASO

Previous Year Paper
08 Oct, 2023 Shift 2





DELHI DEVELOPMENT AUTHORITY
RECRUITMENT CELL
VIKAS SADAN, INA, NEW DELHI - 110023
(<https://www.dda.gov.in>)

Advertisement No. 02/2023/Recdt. Cell/Pers./DDA

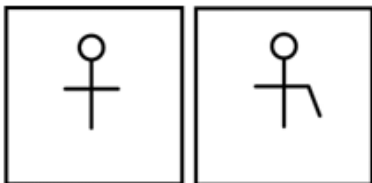
Test Date	08/10/2023
Test Time	11:30 AM - 12:30 PM
Subject	Assistant Section Officer (ASO)

Section : General Intelligence and Reasoning


Q.1 Choose the figure pair which is different from the rest.

Ans

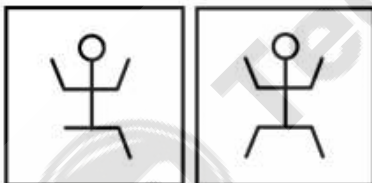
✗ 1.




✓ 2.



✗ 3.



✗ 4.



Question ID : 630680384742

Option 1 ID : 6306801499855

Option 2 ID : 6306801499857

Option 3 ID : 6306801499854

Option 4 ID : 6306801499856

Status : Answered

Chosen Option : 2

Q.2 Rajan said, "This girl is the wife of the grandson of my mother." Who is Rajan to the girl ?

- Ans** ☒ 1. Father-in-law
 ☐ 2. Husband
 ☐ 3. Father
 ☐ 4. Grandfather

Question ID : 630680384576
Option 1 ID : 6306801499193
Option 2 ID : 6306801499191
Option 3 ID : 6306801499192
Option 4 ID : 6306801499190
Status : Answered
Chosen Option : 1

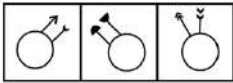
Q.3 In the following question, certain pairs of words are given out of which the words in all pairs except one bear a certain common relationship. Identify the pair in which the words are differently related.

- Ans** ☐ 1. Crops - Grasshopper - Snake
 ☒ 2. Algae - Fungi - Lichen
 ☐ 3. Grass - Rabbit - Fox
 ☐ 4. Plants - Deer - Wolf

Question ID : 630680384808
Option 1 ID : 6306801500120
Option 2 ID : 6306801500121
Option 3 ID : 6306801500119
Option 4 ID : 6306801500118
Status : Marked For Review
Chosen Option : 4



Q.4 The figures in the question are similar in certain manner. Select a figure from the options which possess the same common feature as in the question figures.



Ans

✗ 1.



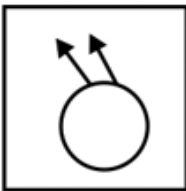
✓ 2.



✗ 3.



✗ 4.



Question ID : 630680386228
Option 1 ID : 6306801505623
Option 2 ID : 6306801505624
Option 3 ID : 6306801505622
Option 4 ID : 6306801505625

Status : Answered

Chosen Option : 2

Q.5 How many pairs of letters in the word "INSTRUCTION" have the same number of letters between them as in the English alphabet (both forward and backward)?

Ans

✗ 1. One

✗ 2. Three

✗ 3. Two

✓ 4. Four

Question ID : 630680384556
Option 1 ID : 6306801499110
Option 2 ID : 6306801499112
Option 3 ID : 6306801499111
Option 4 ID : 6306801499113

Status : Answered

Chosen Option : 4

Q.6 Consider the following table where each letter is denoted by a symbol or a digit as shown.
Read the given conditions carefully and identify combinations that correctly represents 'BLEAIQ' based on the coding system given in the table and the conditions that follow.

Conditions:

- (i) If the first letter is a vowel and the last letter is a consonant, both are to be coded as the code of vowel.
- (ii) If both first and last letters are consonants, both are to coded as 'S'
- (iii) If first letter is a consonant and last letter is a vowel, the codes for first and last letters are to be interchanged

Digit / Symbol	7	@	*	5	8	#	3	8	%	2	9
Letter	D	L	E	G	W	F	I	A	Q	B	R

- Ans**
- ☒ 1. %3* @8%
 - ☒ 2. S* @38S
 - ☒ 3. 2@ *83%
 - ☒ 4. S@ *83S

Question ID : 630680384580
Option 1 ID : 6306801499206
Option 2 ID : 6306801499207
Option 3 ID : 6306801499209
Option 4 ID : 6306801499208
Status : Not Answered
Chosen Option : --

Q.7 In the following triad, each group of letters is related to the subsequent one following a certain logic.
RGTF - SFUE - FSEU
Which of the following option follows the same logic?

- Ans**
- ☒ 1. HDIJ - ICJI - CIIJ
 - ☒ 2. HDIJ - ICII - CIIJ
 - ☒ 3. HDIJ - ICIJ - ICIJ
 - ☒ 4. HDIJ - CJII - CIIJ

Question ID : 630680384789
Option 1 ID : 6306801500042
Option 2 ID : 6306801500044
Option 3 ID : 6306801500043
Option 4 ID : 6306801500045
Status : Answered
Chosen Option : 1

Q.8 Rearranging the given words in ascending alphabetical order, identify the word that comes last in the sequence.
Tenacious Terminate Temperature Temple Tenant

- Ans**
- ☒ 1. Terminate
 - ☒ 2. Tenant
 - ☒ 3. Tenacious
 - ☒ 4. Temperature

Question ID : 630680384550
Option 1 ID : 6306801499086
Option 2 ID : 6306801499089
Option 3 ID : 6306801499087
Option 4 ID : 6306801499088
Status : Answered
Chosen Option : 1

Q.9 Six friends Mina, Nina, Lina, Hina, Tina, and Rina sit on a bench facing south. Lina sits exactly in between Mina and Hina. Rina sits exactly in between Tina and Nina. Five friends sit to the left of Mina. Who sits second to the left of Hina?

- Ans**
- ☒ 1. Nina
 - ☒ 2. Tina
 - ☒ 3. Rina
 - ☒ 4. Mina

Question ID : 630680384517
Option 1 ID : 6306801498954
Option 2 ID : 6306801498956
Option 3 ID : 6306801498955
Option 4 ID : 6306801498957
Status : Answered
Chosen Option : 3

Q.10 Three Statements are given followed by two conclusions numbered I and II. Assuming the statements to be true, even if they seem to be at variance with commonly known facts, decide which of the conclusions logically follow(s) from the statements.

Statement:

Statement I: All pink are blue.

Statement II: All blue are green.

Statement III: All green are white.

Conclusion:

Conclusion I: All pink are white.

Conclusion II: Some green are pink.

- Ans**
- ☒ 1. Only conclusion II follows
 - ☒ 2. Neither conclusion I nor II follows
 - ☒ 3. Both conclusions I and II follow
 - ☒ 4. Only conclusion I follows

Question ID : 630680384729
Option 1 ID : 6306801499803
Option 2 ID : 6306801499805
Option 3 ID : 6306801499804
Option 4 ID : 6306801499802
Status : Answered
Chosen Option : 3

Q.11 Find the wrong number in the series:

40, 42, 46, 58, 72, 90

- Ans**
- ☒ 1. 72
 - ☒ 2. 42
 - ☒ 3. 46
 - ☒ 4. 90

Question ID : 630680384566
Option 1 ID : 6306801499153
Option 2 ID : 6306801499152
Option 3 ID : 6306801499150
Option 4 ID : 6306801499151
Status : Marked For Review
Chosen Option : 3

Q.12 In the following question three statements are given, followed by two conclusions numbered I and II. Assume three given statements to be true even if they seem to be at variance with commonly known facts and then decide which of the given conclusion logically follows from the two statements disregarding commonly known facts.

Statements:

Some songs are poems.

Some poems are rhymes.

All rhymes are paragraph.

Conclusions:

I. Some paragraph are songs.

II. Some paragraph are poems.

- Ans**
- ☒ 1. Both conclusion I and II follow
 - ☒ 2. Only conclusion II follows
 - ☒ 3. Neither conclusion I nor II follows
 - ☒ 4. Only conclusion I follows

Question ID : 630680384635

Option 1 ID : 6306801499428

Option 2 ID : 6306801499427

Option 3 ID : 6306801499429

Option 4 ID : 6306801499426

Status : Answered

Chosen Option : 2

Q.13 There is some relationship between the two terms (letter clusters) on the left of the sign (::). The same relationship exists between the two terms on the right of the sign (::) of which one is missing. Find the missing one from the four alternatives.

KIJR : MGLP :: TZAP : ?

- Ans**
- ☒ 1. RBYS
 - ☒ 2. RXYN
 - ☒ 3. VBCR
 - ☒ 4. VXCN

Question ID : 630680386198

Option 1 ID : 6306801505505

Option 2 ID : 6306801505504

Option 3 ID : 6306801505502

Option 4 ID : 6306801505503

Status : Answered

Chosen Option : 4

Q.14 How many letters are there in the given series that are immediately preceded by a consonant and immediately followed by a symbol?
XYS&@HN%IKZ*FE!

- Ans**
- ☒ 1. 2
 - ☒ 2. 3
 - ☒ 3. 4
 - ☒ 4. 1

Question ID : 630680384458

Option 1 ID : 6306801498719

Option 2 ID : 6306801498720

Option 3 ID : 6306801498721

Option 4 ID : 6306801498718

Status : Answered

Chosen Option : 3

Q.15 Consider the following table where each digit or symbol is coded by a letter as shown.
Read the given conditions carefully and identify combinations that correctly represents '+46#27' based on the coding system given in the table and the conditions that follow.

Conditions:

- (i) If the first element is an even digit and the last element is a symbol, both are to be coded as the code for the even digit.
- (ii) If the first element is a symbol and the last element is an odd digit, their codes are to be interchanged.
- (iii) If the first element is an odd digit and the last element is an even digit, both are to be coded as the code for the odd digit.

Digit / Symbol	5	3	#	2	+	1	&	4	7	6	%
Letter	U	F	Q	J	O	S	V	H	A	K	I

- Ans
- ✓ 1. AHKQJO
 - ✗ 2. OKHJQA
 - ✗ 3. AKHQJO
 - ✗ 4. OHKQJA

Question ID : 630680384582
Option 1 ID : 6306801499217
Option 2 ID : 6306801499215
Option 3 ID : 6306801499214
Option 4 ID : 6306801499216
Status : Not Answered
Chosen Option : --

Q.16 How many such letters are there in the above arrangement, each of which is immediately preceded by a number and immediately followed by a symbol?

Direction:

(LEFT) Y 4 X * 9 % 5 V \$ S 8 R & E 9 & W @ A 9 & H @ 8 V % 2 A # 9 B 2 5 7 Z % (RIGHT)

- Ans
- ✗ 1. Four
 - ✓ 2. Six
 - ✗ 3. Five
 - ✗ 4. Three

Question ID : 630680403555
Option 1 ID : 6306801573731
Option 2 ID : 6306801573733
Option 3 ID : 6306801573732
Option 4 ID : 6306801573730
Status : Answered
Chosen Option : 2

Q.17 Find the wrong term in the series given below.
ZA25, YB23, XC21, WD18, VE17

- Ans
- ✗ 1. VE17
 - ✗ 2. XC21
 - ✗ 3. YB23
 - ✓ 4. WD18

Question ID : 630680384825
Option 1 ID : 6306801500188
Option 2 ID : 6306801500186
Option 3 ID : 6306801500187
Option 4 ID : 6306801500189
Status : Answered
Chosen Option : 4

Q.18 A series is given with one term missing (?). Select the correct alternative from the given ones that will complete the series.
B2Y, D4W, F6U, H8S, ?

- Ans**
- ☒ 1. I9T
 - ☒ 2. J10P
 - ☒ 3. J10Q
 - ☒ 4. K11R

Question ID : 630680384821
Option 1 ID : 6306801500172
Option 2 ID : 6306801500173
Option 3 ID : 6306801500171
Option 4 ID : 6306801500170
Status : Answered
Chosen Option : 3

Q.19 Given a number series, which alternative should be chosen to continue the same pattern and fill in the blank space?
2, 3, 10, 15, ____

- Ans**
- ☒ 1. 1
 - ☒ 2. 25
 - ☒ 3. 26
 - ☒ 4. 19

Question ID : 630680384598
Option 1 ID : 6306801499278
Option 2 ID : 6306801499281
Option 3 ID : 6306801499279
Option 4 ID : 6306801499280
Status : Answered
Chosen Option : 3

Q.20 In reference to an old photograph, Dharam points to a man A and says, "A's only brother is the father of my daughter's father" What is the relationship between A's brother in the photograph and Dharam?

- Ans**
- ☒ 1. Father's father
 - ☒ 2. Son
 - ☒ 3. Brother
 - ☒ 4. Father

Question ID : 630680384775
Option 1 ID : 6306801499986
Option 2 ID : 6306801499988
Option 3 ID : 6306801499987
Option 4 ID : 6306801499989
Status : Answered
Chosen Option : 4

Q.21 Which letter or number is 13th to the right of the letter or number which is 14th from the left?

Direction:

(LEFT) Z 4 X 7 V 9 T 6 R 2 P 1 N 3 L 5 K 8 H 4 F 5 D 6 B 9 T 8 R 2 F 6 W 1 T 9 (RIGHT)

Ans ✓ 1. T

✗ 2. 8

✗ 3. 9

✗ 4. R

Question ID : 630680403559

Option 1 ID : 6306801573749

Option 2 ID : 6306801573748

Option 3 ID : 6306801573747

Option 4 ID : 6306801573746

Status : Answered

Chosen Option : 1

Q.22 In the following question, a statement is given followed by two courses of action numbered I and II. Identify and answer which course(s) of action logically follows.

Statement: The potential strike planned by the freight transporters could significantly disrupt the daily lives of people.

Course of action:

I. In order to prevent the strike, it is important for the City council to effectively engage in negotiations with the transporters regarding their demands.

II. City council should arrange for alternative public transportation system during the strike

Ans ✗ 1. If only II follows

✗ 2. If either I or II follows

✗ 3. If neither I nor II follows

✓ 4. If only I follows

Question ID : 630680384786

Option 1 ID : 6306801500031

Option 2 ID : 6306801500032

Option 3 ID : 6306801500033

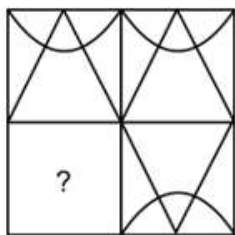
Option 4 ID : 6306801500030

Status : Marked For Review

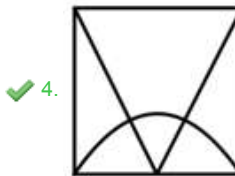
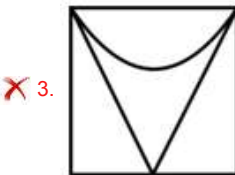
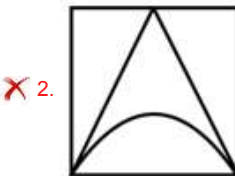
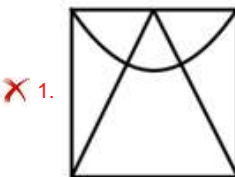
Chosen Option : 4



Q.23 Which of the following answer figure completes the question figure?



Ans



Question ID : 630680384539

Option 1 ID : 6306801499045

Option 2 ID : 6306801499042

Option 3 ID : 6306801499043

Option 4 ID : 6306801499044

Status : Answered

Chosen Option : 4

Q.24 How many such letters are there in the above arrangement, each of which is immediately preceded by a number and immediately followed by a symbol?

Direction:

(LEFT) Y 4 X * 9 % 5 V \$ S 8 R & E 9 & W @ A 9 & H @ 8 V % 2 A # 9 B 2 \$ 7 Z % (RIGHT)

Ans

✗ 1. Five

✓ 2. Six

✗ 3. Four

✗ 4. Three

Question ID : 630680403560

Option 1 ID : 6306801573752

Option 2 ID : 6306801573753

Option 3 ID : 6306801573751

Option 4 ID : 6306801573750

Status : Answered

Chosen Option : 2

Q.25 Find the missing element in the given set to make them equal.

A = {Letters of the word ASSUMING}

B = {IM, GN, SA, ?}

- Ans
- ☒ 1. MN
 - ☒ 2. US
 - ☒ 3. IN
 - ☒ 4. SU

Question ID : 630680384594
Option 1 ID : 6306801499263
Option 2 ID : 6306801499262
Option 3 ID : 6306801499265
Option 4 ID : 6306801499264
Status : Not Answered
Chosen Option : --

Section : General Awareness

Q.1 What was the duration of the Second Five Year Plan in India?

- Ans
- ☒ 1. 1951-56
 - ☒ 2. 1956-61
 - ☒ 3. 1958-63
 - ☒ 4. 1966-72

Question ID : 630680384301
Option 1 ID : 6306801498090
Option 2 ID : 6306801498091
Option 3 ID : 6306801498092
Option 4 ID : 6306801498093
Status : Answered
Chosen Option : 2

Q.2 Who among the following achieved a historic milestone by securing India's first-ever medal at the Asian fencing championships?

- Ans
- ☒ 1. C.A. Bhavani Devi
 - ☒ 2. Dipa Karmakar
 - ☒ 3. PV Sindhu
 - ☒ 4. Dutee Chand

Question ID : 630680384054
Option 1 ID : 6306801497108
Option 2 ID : 6306801497106
Option 3 ID : 6306801497109
Option 4 ID : 6306801497107
Status : Not Answered
Chosen Option : --

Q.3 Which of the following days is celebrated by the National Commission of India in order to focus religious harmony and better understanding of the minority communities in the country?

- Ans
- ☒ 1. Empowerment Day
 - ☒ 2. Labour Day
 - ☒ 3. Health Day
 - ☒ 4. The Minorities Rights Day

Question ID : 630680384046
Option 1 ID : 6306801497077
Option 2 ID : 6306801497074
Option 3 ID : 6306801497075
Option 4 ID : 6306801497076
Status : Marked For Review
Chosen Option : 4

Q.4 Which committee was formed to review and give recommendations on the Nationalization of Banks in India?

- Ans
- ☒ 1. Raghuram Rajan Committee
 - ☒ 2. Narsimham Committee
 - ☒ 3. Bimal Jalan Committee
 - ☒ 4. C. Rangarajan Committee

Question ID : 630680384183
Option 1 ID : 6306801497622
Option 2 ID : 6306801497625
Option 3 ID : 6306801497624
Option 4 ID : 6306801497623
Status : Not Answered
Chosen Option : --

Q.5 In total how many neighbouring countries are there of India?

- Ans
- ☒ 1. 6
 - ☒ 2. 4
 - ☒ 3. 9
 - ☒ 4. 8

Question ID : 630680384091
Option 1 ID : 6306801497257
Option 2 ID : 6306801497256
Option 3 ID : 6306801497255
Option 4 ID : 6306801497254
Status : Answered
Chosen Option : 4

Q.6 When was the Self Help Group (SHG) Bank Linkage Programme set up in India?

- Ans
- ☒ 1. 1976
 - ☒ 2. 1966
 - ☒ 3. 1992
 - ☒ 4. 1988

Question ID : 630680384284
Option 1 ID : 6306801498025
Option 2 ID : 6306801498024
Option 3 ID : 6306801498022
Option 4 ID : 6306801498023
Status : Not Answered
Chosen Option : --

Q.7 Who among the following established the Prarthana Samaj?

- Ans ☒ 1. Dr. Atma Ram Pandurang
- ☐ 2. Bal Shastri Jambekar
- ☐ 3. Lal Bahadur Shastri
- ☐ 4. Ishwar Chandra Vidyasagar

Question ID : 630680384330
Option 1 ID : 6306801498207
Option 2 ID : 6306801498209
Option 3 ID : 6306801498206
Option 4 ID : 6306801498208
Status : Answered
Chosen Option : 1

Q.8 Which Mughal emperor is renowned for the construction of the Red Fort and Jama Masjid in Delhi?

- Ans ☐ 1. Akbar the Great
- ☒ 2. Shah Jahan
- ☐ 3. Humayun
- ☐ 4. Aurangzeb

Question ID : 630680384438
Option 1 ID : 6306801498641
Option 2 ID : 6306801498640
Option 3 ID : 6306801498639
Option 4 ID : 6306801498638
Status : Answered
Chosen Option : 2

Q.9 In which of the following states in India is the famous religious festival "Ganesh Chaturthi" best celebrated?

- Ans ☒ 1. Maharashtra
- ☐ 2. Kolkata
- ☐ 3. Assam
- ☐ 4. Bangalore

Question ID : 630680384070
Option 1 ID : 6306801497171
Option 2 ID : 6306801497173
Option 3 ID : 6306801497170
Option 4 ID : 6306801497172
Status : Answered
Chosen Option : 1

Q.10 The "Kaveri River" forms the second-largest river basin in India and is primarily shared by which states?

- Ans** ☒ 1. Tamil Nadu and Karnataka
 ☐ 2. Karnataka and Kerala
 ☐ 3. Madhya Pradesh and Chhattisgarh
 ☐ 4. Andhra Pradesh and Telangana

Question ID : 630680384200
Option 1 ID : 6306801497692
Option 2 ID : 6306801497690
Option 3 ID : 6306801497693
Option 4 ID : 6306801497691
Status : Not Attempted and Marked For Review
Chosen Option : --

Q.11 Which of the following is an autobiography of Dr B.R. Ambedkar?

- Ans** ☐ 1. Courage And Conviction
 ☒ 2. Waiting for a Visa
 ☐ 3. A Shot at History
 ☐ 4. An Autobiography

Question ID : 630680384266
Option 1 ID : 6306801497952
Option 2 ID : 6306801497951
Option 3 ID : 6306801497950
Option 4 ID : 6306801497953
Status : Answered
Chosen Option : 2

Q.12 Which national park in India is known for its population of Royal Bengal tigers?

- Ans** ☐ 1. Periyar National Park
 ☒ 2. Sunderbans National Park
 ☐ 3. Bandipur National Park
 ☐ 4. Sariska National Park

Question ID : 630680384431
Option 1 ID : 6306801498612
Option 2 ID : 6306801498610
Option 3 ID : 6306801498613
Option 4 ID : 6306801498611
Status : Answered
Chosen Option : 2

Q.13 Which group is responsible for the management and administration of Indian railways?

- Ans** ☒ 1. Indian Railways Board
 ☐ 2. Railway Recruitment Board (RRB)
 ☐ 3. Indian Railway Catering and Tourism Corporation (IRCTC)
 ☐ 4. Railway Protection Force (RPF)

Question ID : 630680386488
Option 1 ID : 6306801506662
Option 2 ID : 6306801506664
Option 3 ID : 6306801506663
Option 4 ID : 6306801506665
Status : Not Answered
Chosen Option : --

Q.14 As of the latest available data from July 2023, what is the ranking of India on the Human Development Index (HDI) among countries worldwide?

- Ans ☒ 1. 132
☒ 2. 98
☒ 3. 103
☒ 4. 100

Question ID : 630680386445
Option 1 ID : 6306801506491
Option 2 ID : 6306801506492
Option 3 ID : 6306801506493
Option 4 ID : 6306801506490
Status : Answered
Chosen Option : 1

Q.15 Who won the Dronacharya Award (Lifetime) in 2022 for wrestling?

- Ans ☒ 1. Suma Siddharth Shirur
☒ 2. Raj Singh
☒ 3. Bimal Prafulla Ghosh
☒ 4. Dinesh Jawahar Lad

Question ID : 630680384156
Option 1 ID : 6306801497517
Option 2 ID : 6306801497514
Option 3 ID : 6306801497516
Option 4 ID : 6306801497515
Status : Not Answered
Chosen Option : --

Q.16 The "Nilgiri Langur," a primate species, is native to which region in India?

- Ans ☒ 1. Eastern Himalayas
☒ 2. Western Ghats
☒ 3. Deccan Plateau
☒ 4. Sundarbans Mangrove Forests

Question ID : 630680384205
Option 1 ID : 6306801497710
Option 2 ID : 6306801497713
Option 3 ID : 6306801497712
Option 4 ID : 6306801497711
Status : Marked For Review
Chosen Option : 2

Q.17 Who among the following is the Indian to be recently honoured with the prestigious Spinoza prize for his/her contribution to science?

- Ans ☒ 1. SS Abhyankar
☒ 2. Har Gobind Khurana
☒ 3. Joyeeta Gupta
☒ 4. Raj Reddy

Question ID : 630680384038
Option 1 ID : 6306801497043
Option 2 ID : 6306801497045
Option 3 ID : 6306801497042
Option 4 ID : 6306801497044
Status : Not Answered
Chosen Option : --

Q.18 Which of the following company launched its talkative Bot 'BARD' in India for free?

- Ans ☒ 1. Google
☐ 2. Apple
☐ 3. Intel
☐ 4. Microsoft

Question ID : 630680384041
Option 1 ID : 6306801497055
Option 2 ID : 6306801497056
Option 3 ID : 6306801497057
Option 4 ID : 6306801497054
Status : Answered
Chosen Option : 1

Q.19 The Battle of Plassey took place in which present-day Indian state?

- Ans ☐ 1. Odisha
☒ 2. West Bengal
☐ 3. Bihar
☐ 4. Jharkhand

Question ID : 630680384218
Option 1 ID : 6306801497763
Option 2 ID : 6306801497762
Option 3 ID : 6306801497765
Option 4 ID : 6306801497764
Status : Answered
Chosen Option : 2

Q.20 How many official languages are there in India?

- Ans ☐ 1. 26
☐ 2. 29
☐ 3. 25
☒ 4. 22

Question ID : 630680384281
Option 1 ID : 6306801498013
Option 2 ID : 6306801498012
Option 3 ID : 6306801498011
Option 4 ID : 6306801498010
Status : Answered
Chosen Option : 4

Q.21 Which of the following prominent religious sites is located in Mumbai?

- Ans ☐ 1. Alamgir Dargah
☐ 2. Ajmer Sharif Dargah
☐ 3. Dargah Sharif
☒ 4. Haji Ali Dargah

Question ID : 630680384210
Option 1 ID : 6306801497731
Option 2 ID : 6306801497732
Option 3 ID : 6306801497733
Option 4 ID : 6306801497730
Status : Not Answered
Chosen Option : --

Q.22 Which festival is celebrated with great enthusiasm in the state of Gujarat, featuring vibrant dance forms like Garba and Dandiya Raas?

- Ans
- ☒ 1. Diwali
 - ☒ 2. Holi
 - ☒ 3. Onam
 - ☒ 4. Navratri

Question ID : 630680386428
Option 1 ID : 6306801506422
Option 2 ID : 6306801506423
Option 3 ID : 6306801506424
Option 4 ID : 6306801506425
Status : Answered
Chosen Option : 4

Q.23 As per the Sustainable Development Goals, India aims to provide all girls and boys complete free, equitable and quality primary and secondary education by which year?

- Ans
- ☒ 1. 2025
 - ☒ 2. 2050
 - ☒ 3. 2040
 - ☒ 4. 2030

Question ID : 630680384149
Option 1 ID : 6306801497489
Option 2 ID : 6306801497487
Option 3 ID : 6306801497488
Option 4 ID : 6306801497486
Status : Not Answered
Chosen Option : --

Q.24 Who was a renowned mathematician from India and often referred to as the "Man Who Knew Infinity"?

- Ans
- ☒ 1. C.V. Raman
 - ☒ 2. Satyendra Nath Bose
 - ☒ 3. Srinivasa Ramanujan
 - ☒ 4. Homi Bhabha

Question ID : 630680386485
Option 1 ID : 6306801506651
Option 2 ID : 6306801506653
Option 3 ID : 6306801506650
Option 4 ID : 6306801506652
Status : Answered
Chosen Option : 3

Q.25 Which among the following is the autobiography of Ravi Shankar, the famous Sitarist Of India?

- Ans
- ☒ 1. My Country, My Life
 - ☒ 2. Ente Katha
 - ☒ 3. My Life, My Music
 - ☒ 4. Atmakatha

Question ID : 630680384065
Option 1 ID : 6306801497151
Option 2 ID : 6306801497153
Option 3 ID : 6306801497152
Option 4 ID : 6306801497150
Status : Not Answered
Chosen Option : --

Section : Quantitative Aptitude

Q.1 Mike and Rossy invest in a business in the ratio 2:3. If 10% of the total profit goes to charity and shares of Mike is ₹1000, what will be the total profit ?

- Ans
- ☒ 1. ₹1666.67
 - ☒ 2. ₹1665.67
 - ☒ 3. ₹1664.67
 - ☒ 4. ₹1663.67

Question ID : 630680401836
Option 1 ID : 6306801567114
Option 2 ID : 6306801567115
Option 3 ID : 6306801567116
Option 4 ID : 6306801567117
Status : Not Answered
Chosen Option : --

Q.2 What will be the total percentage change in the volume of cuboid if its length, breadth and height are decreased by 10%, 10% and 20% respectively.

- Ans
- ☒ 1. decrease by 35.2%
 - ☒ 2. increase by 35%
 - ☒ 3. increase by 35.2%
 - ☒ 4. decrease by 35%

Question ID : 630680401819
Option 1 ID : 6306801567047
Option 2 ID : 6306801567048
Option 3 ID : 6306801567046
Option 4 ID : 6306801567049
Status : Answered
Chosen Option : 1

Q.3 In an election, the votes cast for the two candidates were in the ratio 3:4. If the winning candidate got 20004 votes then how many votes did the rival candidate get?

- Ans**
- ☒ 1. 15002
 - ☒ 2. 15000
 - ☒ 3. 15001
 - ☒ 4. 15003

Question ID : 630680401816
Option 1 ID : 6306801567036
Option 2 ID : 6306801567034
Option 3 ID : 6306801567035
Option 4 ID : 6306801567037
Status : Answered
Chosen Option : 4

Q.4 If $x = 1$, $y = 2$ and $z = 0$ then value of $(1 + xyz)(1 - xyz + x^2y^2z^2)$

- Ans**
- ☒ 1. -1
 - ☒ 2. 0
 - ☒ 3. -2
 - ☒ 4. 1

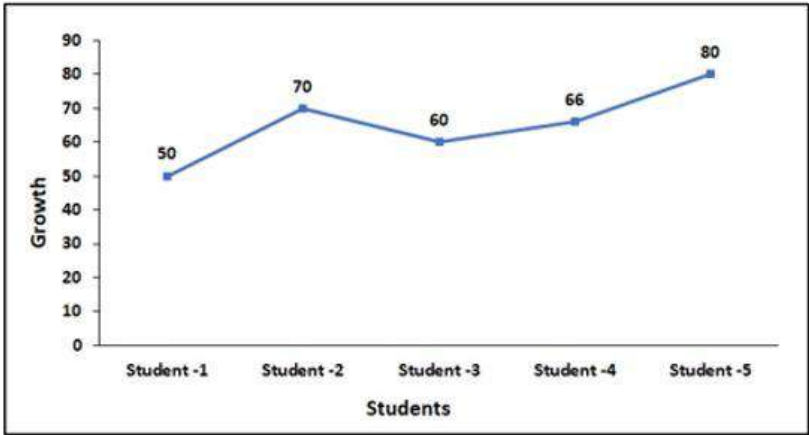
Question ID : 630680401780
Option 1 ID : 6306801566892
Option 2 ID : 6306801566890
Option 3 ID : 6306801566893
Option 4 ID : 6306801566891
Status : Answered
Chosen Option : 4

Q.5 Is the number 7281091 divisible by 9 ? If no, find the remainder.

- Ans**
- ☒ 1. No, Remainder is 3
 - ☒ 2. No, Remainder is 5
 - ☒ 3. Yes
 - ☒ 4. No, Remainder is 1

Question ID : 630680401812
Option 1 ID : 6306801567020
Option 2 ID : 6306801567021
Option 3 ID : 6306801567018
Option 4 ID : 6306801567019
Status : Answered
Chosen Option : 4

Q.6 Study the given graph and tell which student is showing the highest growth ?



- Ans
- ✓ 1. Student-2
 - ✗ 2. Student-1
 - ✗ 3. Student-4
 - ✗ 4. Student-3

Question ID : 630680401792
Option 1 ID : 6306801566939
Option 2 ID : 6306801566938
Option 3 ID : 6306801566941
Option 4 ID : 6306801566940
Status : Answered
Chosen Option : 1

Q.7 A path 3 m wide surrounds a circular pond of radius 25 m. How many cubic meters of rubble are required to grave the path to a depth of 30 cm ?

- Ans
- ✗ 1. 148.91 m³
 - ✓ 2. 149.91 m³
 - ✗ 3. 147.91 m³
 - ✗ 4. 146.91 m³

Question ID : 630680401806
Option 1 ID : 6306801566994
Option 2 ID : 6306801566997
Option 3 ID : 6306801566995
Option 4 ID : 6306801566996
Status : Answered
Chosen Option : 2

Q.8 A class of 30 students took a Mathematics test. 15 students had an average score of 70 and the other 15 students had the average score of 80. What is the average score of the whole class?

- Ans
- ✗ 1. 65
 - ✓ 2. 75
 - ✗ 3. 70
 - ✗ 4. 60

Question ID : 630680401785
Option 1 ID : 6306801566912
Option 2 ID : 6306801566913
Option 3 ID : 6306801566911
Option 4 ID : 6306801566910
Status : Answered
Chosen Option : 2

Q.9 Simplify:

$$\frac{(4ab)^{-2}}{7b^3a} = ?$$

Ans

✓ 1. $\left(\frac{1}{112}\right)\left(\frac{1}{a^3b^5}\right)$

✗ 2. $\left(\frac{1}{112}\right)\left(\frac{1}{a^3b^3}\right)$

✗ 3. $\left(\frac{1}{110}\right)\left(\frac{1}{a^3b^5}\right)$

✗ 4. $\left(\frac{1}{110}\right)\left(\frac{1}{a^3b^3}\right)$

Question ID : 630680401809

Option 1 ID : 6306801567006

Option 2 ID : 6306801567007

Option 3 ID : 6306801567008

Option 4 ID : 6306801567009

Status : Answered

Chosen Option : 1

Q.10 Secant-Tangent Theorem states that

Ans ✗ 1.

If a secant and a tangent are drawn to a circle from the same external point, the product of the lengths of the secant and its external segment equals the square of the length of the secant segment.

✓ 2.

If a secant and a tangent are drawn to a circle from the same external point, the product of the lengths of the secant and its external segment equals the square of the length of the tangent segment.

✗ 3.

If a secant and a tangent are drawn to a circle from the same external point, the product of the lengths of the secant and its internal segment equals the square of the length of the secant segment.

✗ 4.

If a secant and a tangent are drawn to a circle from the same external point, the product of the lengths of the secant and its internal segment equals the square of the length of the tangent segment.

Question ID : 630680401823

Option 1 ID : 6306801567062

Option 2 ID : 6306801567064

Option 3 ID : 6306801567063

Option 4 ID : 6306801567065

Status : Answered

Chosen Option : 2

Q.11 A man drives a bike at a speed 45km/hr for 3 hours and then he decides to slow down to 35 km/hr for the next 2 hours.
What is the average speed ?

- Ans**
- ✓ 1. 41 km/hr
 - ✗ 2. 30 km/hr
 - ✗ 3. 40 km/hr
 - ✗ 4. 31 km/hr

Question ID : 630680401789
Option 1 ID : 6306801566929
Option 2 ID : 6306801566926
Option 3 ID : 6306801566928
Option 4 ID : 6306801566927
Status : Answered
Chosen Option : 1

Q.12 A book was bought for ₹300 and sold for ₹350.Find profit or loss percentage.

- Ans**
- ✗ 1. 15.67%,Loss
 - ✗ 2. 16.67%, Loss
 - ✓ 3. 16.67%,Profit
 - ✗ 4. 15.67%,Profit

Question ID : 630680401831
Option 1 ID : 6306801567094
Option 2 ID : 6306801567096
Option 3 ID : 6306801567097
Option 4 ID : 6306801567095
Status : Answered
Chosen Option : 3

Q.13 Find the volume of the sphere whose radius is 7.5 cm.

- Ans**
- ✗ 1. 1767.86 cm²
 - ✗ 2. 1766.85 cm²
 - ✓ 3. 1767.86 cm³
 - ✗ 4. 1766.85 cm³

Question ID : 630680401798
Option 1 ID : 6306801566965
Option 2 ID : 6306801566964
Option 3 ID : 6306801566963
Option 4 ID : 6306801566962
Status : Answered
Chosen Option : 3

Q.14 The height of a conical vessel is 5.5 cm. If the capacity of the vessel is 4 litres of water. Find the radius of the base of the vessel.

- Ans** ☒ 1. 26.35 cm
☐ 2. 62.53 cm
☐ 3. 62.35 cm
☐ 4. 26.53 cm

Question ID : 630680401801

Option 1 ID : 6306801566974

Option 2 ID : 6306801566977

Option 3 ID : 6306801566976

Option 4 ID : 6306801566975

Status : Not Answered

Chosen Option : --

Q.15 If $9x + 10y = 2$ and $xy = 1$, find the value of $(729x^3 + 1000y^3)$.

- Ans** ☐ 1. - 531
☐ 2. 532
☐ 3. 531
☒ 4. - 532

Question ID : 630680401777

Option 1 ID : 6306801566878

Option 2 ID : 6306801566881

Option 3 ID : 6306801566880

Option 4 ID : 6306801566879

Status : Answered

Chosen Option : 4

Q.16 If p and q are radii of two circle with centres L and M , then there will be _____ common tangents if $|p-q| < LM < p+q$.

- Ans** ☐ 1. four
☐ 2. one
☒ 3. two
☐ 4. three

Question ID : 630680401822

Option 1 ID : 6306801567058

Option 2 ID : 6306801567059

Option 3 ID : 6306801567060

Option 4 ID : 6306801567061

Status : Answered

Chosen Option : 3

Q.17 A tent is formed as a cylinder of diameter 50 m and height 3 m, surmounted by a cone of equal base and height 6 m.
Find the capacity of tent.

- Ans**
- ☒ 1. 9811.43 m³
 - ☒ 2. 9721.43 m³
 - ☒ 3. 9821.43 m³
 - ☒ 4. 9822.43 m³

Question ID : 630680401803

Option 1 ID : 6306801566982

Option 2 ID : 6306801566984

Option 3 ID : 6306801566985

Option 4 ID : 6306801566983

Status : Not Attempted and
Marked For Review

Chosen Option : --

Q.18 Simplify:

$$\{(x^2 + y^2)^3 - (x^2 - y^2)^3\}$$

- Ans**
- ☒ 1. $(y^4 + 3x^4)$
 - ☒ 2. $2y^2(y^4 + 3x^4)$
 - ☒ 3. $2y^2(y^4 - 3x^4)$
 - ☒ 4. $(y^4 - 3x^4)$

Question ID : 630680401783

Option 1 ID : 6306801566902

Option 2 ID : 6306801566904

Option 3 ID : 6306801566905

Option 4 ID : 6306801566903

Status : Answered

Chosen Option : 2

Q.19 If $x = 40^\circ$, then what is the value of $3\sin x - 4(\sin x)^3$?

- Ans**
- ☒ 1. $-\frac{1}{2}$
 - ☒ 2. $\frac{1}{2}$
 - ☒ 3. $-\frac{\sqrt{3}}{2}$
 - ☒ 4. $\frac{\sqrt{3}}{2}$

Question ID : 630680401849

Option 1 ID : 6306801567167

Option 2 ID : 6306801567166

Option 3 ID : 6306801567169

Option 4 ID : 6306801567168

Status : Answered

Chosen Option : 4

Q.20 If the sides of a triangle in the ratio 2:3:4, and the perimeter of the triangle is 81 cm. Find the sides on the triangle.

- Ans**
- ☒ 1. 18 cm., 27 cm., 38 cm.
 - ☒ 2. 18 cm., 27 cm., 36 cm.
 - ☒ 3. 19 cm., 27 cm., 36 cm.
 - ☒ 4. 18 cm., 29 cm., 36 cm.

Question ID : 630680401828
Option 1 ID : 6306801567085
Option 2 ID : 6306801567083
Option 3 ID : 6306801567082
Option 4 ID : 6306801567084
Status : Answered
Chosen Option : 2

Q.21 Two numbers are respectively 30% and 50% more than a third number. What will be the ratio of two numbers ?

- Ans**
- ☒ 1. 15:17
 - ☒ 2. 09:11
 - ☒ 3. 13:15
 - ☒ 4. 11:13

Question ID : 630680401838
Option 1 ID : 6306801567125
Option 2 ID : 6306801567123
Option 3 ID : 6306801567124
Option 4 ID : 6306801567122
Status : Answered
Chosen Option : 3

Q.22 A TV and Refrigerator were sold for ₹12000 each. If the TV was sold at a loss of 20% and the refrigerator at a gain of 10%. Find the overall Profit% or loss%.

- Ans**
- ☒ 1. 0.66%
 - ☒ 2. 7.37%
 - ☒ 3. 8.37%
 - ☒ 4. 0.77%

Question ID : 630680401833
Option 1 ID : 6306801567105
Option 2 ID : 6306801567102
Option 3 ID : 6306801567103
Option 4 ID : 6306801567104
Status : Answered
Chosen Option : 2

Q.23 X can do a job in 25 days and Y can do the same job in 20 days but with the help of Z, they finished the work 10 days.
In how many days can Z alone do the same job ?

- Ans**
- ☐ 1. 200 days
 - ☒ 2. 100 days
 - ☐ 3. 300 days
 - ☐ 4. 400 days

Question ID : 630680401845
Option 1 ID : 6306801567151
Option 2 ID : 6306801567150
Option 3 ID : 6306801567152
Option 4 ID : 6306801567153
Status : Answered
Chosen Option : 2

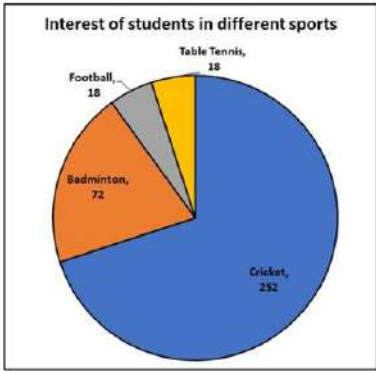
Q.24 Two pipes L and M fill the tank alone in 10 and 20 hours respectively. If the both pipes opened together, then in how many hours will the tank be filled ?

- Ans**
- ☐ 1. Approx 7 and $\frac{1}{2}$ hours
 - ☐ 2. Approx. 7 hours
 - ☒ 3. Approx. 6 and $\frac{1}{2}$ hours
 - ☐ 4. Approx. 6 hours

Question ID : 630680401842
Option 1 ID : 6306801567141
Option 2 ID : 6306801567139
Option 3 ID : 6306801567138
Option 4 ID : 6306801567140
Status : Answered
Chosen Option : 3



Q.25 The following pie chart shows the interest of students in different sports. Read the graph and answer that what percent of students are interested in the cricket ?



- Ans
- ☒ 1. 90%
 - ☒ 2. 80%
 - ☒ 3. 60%
 - ☒ 4. 70%

Question ID : 630680401794
Option 1 ID : 6306801566949
Option 2 ID : 6306801566948
Option 3 ID : 6306801566946
Option 4 ID : 6306801566947
Status : Answered
Chosen Option : 4

Section : English Comprehension

Q.1 Select the option to fill in the missing sentence that fits into the context of the passage.

- A. Buck's first day on the Dyea beach was like a nightmare.
- B. Every hour was filled with shock and surprise.
- C. _____.
- D. No lazy, sun-kissed life was this, with nothing to do but loaf and be bored.

- Ans
- ☒ 1. He had suddenly been jerked from the heart of civilisation and flung into the heart of things primordial.
 - ☒ 2. Buck lived at a big house in the sun-kissed Santa Clara Valley.
 - ☒ 3. His father, Elmo, a huge St Bernard, had been the Judge's inseparable companion.
 - ☒ 4. He was not so large - he weighed only one hundred and forty pounds - for his mother, Shep, had been a Scotch shepherd dog.

Question ID : 630680403542
Option 1 ID : 6306801573680
Option 2 ID : 6306801573678
Option 3 ID : 6306801573679
Option 4 ID : 6306801573681
Status : Not Answered
Chosen Option : --

Q.2 Fill in the blank with the most appropriate option.
What better way to _____ a serious issue without commandeering the meal?

- Ans
- ☒ 1. step up
 - ☒ 2. bring up
 - ☒ 3. pull off
 - ☒ 4. turn up

Question ID : 630680385575
Option 1 ID : 6306801503078
Option 2 ID : 6306801503079
Option 3 ID : 6306801503080
Option 4 ID : 6306801503081
Status : Not Answered
Chosen Option : --

Q.3 The statement below has been given with bracketed text. Select the option with correct Idiom for the bracketed text.
That new budget bill was (useless and hopeless) before it hit the Parliament.

- Ans
- ☒ 1. down in the drain
 - ☒ 2. an axe to grind
 - ☒ 3. an albatross around the neck
 - ☒ 4. a dead duck

Question ID : 630680385638
Option 1 ID : 6306801503310
Option 2 ID : 6306801503311
Option 3 ID : 6306801503313
Option 4 ID : 6306801503312
Status : Marked For Review
Chosen Option : 4

Q.4 Sentences of a paragraph are given below in jumbled order. Arrange the sentences in the correct order to form a meaningful and coherent paragraph.

- A. Having done this, I picked up my rifle from where I put it on my bed, and headed down the valley.
- B. Calling for a cup of tea which served me as dinner, I drank it while standing in the moonlight.
- C. Then, calling my eight men together, I instructed them to wait for me in the village until the following evening, and if I did not return by then, to pack up my things and start early the next morning for Naini Tal.
- D. My men, all of whom had been with me for years, said not a word either to ask me where I was going or to try to dissuade me from going.

- Ans
- ☒ 1. BCAD
 - ☒ 2. DBCA
 - ☒ 3. DACB
 - ☒ 4. CBAD

Question ID : 630680403545
Option 1 ID : 6306801573690
Option 2 ID : 6306801573691
Option 3 ID : 6306801573693
Option 4 ID : 6306801573692
Status : Answered
Chosen Option : 1

Q.5 Select the word from the options which is the same in meaning to the bracketed word given in the sentence below.
Jaron Lanier has written and spoken about this issue with great (sagacity).

- Ans**
- ☒ 1. criticism
 - ☒ 2. alliance
 - ☒ 3. insight
 - ☒ 4. steadiness

Question ID : 630680385653
Option 1 ID : 6306801503372
Option 2 ID : 6306801503370
Option 3 ID : 6306801503373
Option 4 ID : 6306801503371
Status : Answered
Chosen Option : 3

Comprehension:

Read the passage carefully and choose the best answer to each question out of the four alternatives.

Madame Curie, a pioneering scientist and the first woman to win a Nobel Prize, led a remarkable life of groundbreaking discoveries and unwavering dedication to science. Born as Marie Skłodowska in Poland in 1867, she faced gender-based obstacles to education, but her passion for learning led her to study in Paris.

In 1898, Marie and her husband, Pierre Curie, discovered two new radioactive elements, polonium and radium, a feat that earned them the Nobel Prize in Physics. Undeterred by personal tragedy after Pierre's untimely death, she continued her research and became the first person to win a second Nobel Prize, this time in Chemistry, for her work on radioactivity. Despite facing discrimination as a female scientist, Madame Curie's determination and brilliance shone through. Her groundbreaking research laid the foundation for modern nuclear physics and medical advancements, making her an enduring symbol of scientific excellence and a trailblazer for women in STEM fields. Madame Curie's legacy continues to inspire generations of aspiring scientists worldwide.

SubQuestion No : 6

Q.6 Which title best represents the passage?

- Ans**
- ☒ 1. Marie Skłodowska: A Life of Perseverance and Discovery
 - ☒ 2. Gender Discrimination in the Scientific World: Madame Curie's Struggles
 - ☒ 3. The Nobel Prize and Its Impact on Modern Science
 - ☒ 4. Madame Curie and Her Nobel Prize-Winning Discoveries

Question ID : 630680385752
Option 1 ID : 6306801503730
Option 2 ID : 6306801503732
Option 3 ID : 6306801503733
Option 4 ID : 6306801503731
Status : Answered
Chosen Option : 1

Comprehension:

Read the passage carefully and choose the best answer to each question out of the four alternatives.

Madame Curie, a pioneering scientist and the first woman to win a Nobel Prize, led a remarkable life of groundbreaking discoveries and unwavering dedication to science. Born as Marie Skłodowska in Poland in 1867, she faced gender-based obstacles to education, but her passion for learning led her to study in Paris.

In 1898, Marie and her husband, Pierre Curie, discovered two new radioactive elements, polonium and radium, a feat that earned them the Nobel Prize in Physics. Undeterred by personal tragedy after Pierre's untimely death, she continued her research and became the first person to win a second Nobel Prize, this time in Chemistry, for her work on radioactivity. Despite facing discrimination as a female scientist, Madame Curie's determination and brilliance shone through. Her groundbreaking research laid the foundation for modern nuclear physics and medical advancements, making her an enduring symbol of scientific excellence and a trailblazer for women in STEM fields. Madame Curie's legacy continues to inspire generations of aspiring scientists worldwide.

SubQuestion No : 7

Q.7 Which statement connects the facts from the passage to the world?

- Ans ☒ 1. The Nobel Prize in Physics was awarded to Marie Skłodowska Curie posthumously.
- ☒ 2. Marie Skłodowska Curie's struggle against gender-based obstacles inspired the feminist movement worldwide.
- ☒ 3. Madame Curie's research on radioactivity laid the foundation for modern nuclear weapons.
- ☒ 4. Madame Curie's discoveries of polonium and radium paved the way for advancements in nuclear medicine.

Question ID : 630680385754

Option 1 ID : 6306801503741

Option 2 ID : 6306801503739

Option 3 ID : 6306801503738

Option 4 ID : 6306801503740

Status : Answered

Chosen Option : 3

Comprehension:

Read the passage carefully and choose the best answer to each question out of the four alternatives.

Madame Curie, a pioneering scientist and the first woman to win a Nobel Prize, led a remarkable life of groundbreaking discoveries and unwavering dedication to science. Born as Marie Skłodowska in Poland in 1867, she faced gender-based obstacles to education, but her passion for learning led her to study in Paris.

In 1898, Marie and her husband, Pierre Curie, discovered two new radioactive elements, polonium and radium, a feat that earned them the Nobel Prize in Physics. Undeterred by personal tragedy after Pierre's untimely death, she continued her research and became the first person to win a second Nobel Prize, this time in Chemistry, for her work on radioactivity. Despite facing discrimination as a female scientist, Madame Curie's determination and brilliance shone through. Her groundbreaking research laid the foundation for modern nuclear physics and medical advancements, making her an enduring symbol of scientific excellence and a trailblazer for women in STEM fields. Madame Curie's legacy continues to inspire generations of aspiring scientists worldwide.

SubQuestion No : 8

Q.8 What is the central theme of the passage?

- Ans ☒ 1. The Nobel Prize-Winning Discoveries of Marie Skłodowska Curie
- ☒ 2. Marie Skłodowska Curie: A Trailblazer in Nuclear Physics
- ☒ 3. Madame Curie's Struggles Against Gender Discrimination
- ☒ 4. Scientific Advancements and Modern Medical Breakthroughs

Question ID : 630680385753

Option 1 ID : 6306801503735

Option 2 ID : 6306801503736

Option 3 ID : 6306801503734

Option 4 ID : 6306801503737

Status : Answered

Chosen Option : 2

Comprehension:

Read the passage carefully and choose the best answer to each question out of the four alternatives.

Madame Curie, a pioneering scientist and the first woman to win a Nobel Prize, led a remarkable life of groundbreaking discoveries and unwavering dedication to science. Born as Marie Skłodowska in Poland in 1867, she faced gender-based obstacles to education, but her passion for learning led her to study in Paris.

In 1898, Marie and her husband, Pierre Curie, discovered two new radioactive elements, polonium and radium, a feat that earned them the Nobel Prize in Physics. Undeterred by personal tragedy after Pierre's untimely death, she continued her research and became the first person to win a second Nobel Prize, this time in Chemistry, for her work on radioactivity. Despite facing discrimination as a female scientist, Madame Curie's determination and brilliance shone through. Her groundbreaking research laid the foundation for modern nuclear physics and medical advancements, making her an enduring symbol of scientific excellence and a trailblazer for women in STEM fields. Madame Curie's legacy continues to inspire generations of aspiring scientists worldwide.

SubQuestion No : 9

Q.9 What tone does the passage adopt when describing Madame Curie?

- Ans ☒ 1. Critical and Condescending
- ☒ 2. Indifferent and Dispassionate
- ☒ 3. Sympathetic and Sorrowful
- ☒ 4. Admiring and Reverential

Question ID : 630680385755

Option 1 ID : 6306801503744

Option 2 ID : 6306801503742

Option 3 ID : 6306801503745

Option 4 ID : 6306801503743

Status : Answered

Chosen Option : 4

Q.10 Select the option to fill in the missing sentence that fits into the context of the passage.

A. A ghooral and a langur calling.

B. Ghooral do occasionally call on seeing human beings, but not langurs.

C. _____.

D. Was it possible that the tiger had lingered near the scene of its kill and on being disturbed, had moved off and been seen, first by the ghooral, and then by the langur?

- Ans ☒ 1. The branches of the tree were broken off by the langurs.
- ☒ 2. On my last trip to the hills, I had seen two ghoorals.
- ☒ 3. Both will call on seeing a tiger, however.
- ☒ 4. The tiger must have killed the langurs.

Question ID : 630680403543

Option 1 ID : 6306801573682

Option 2 ID : 6306801573683

Option 3 ID : 6306801573684

Option 4 ID : 6306801573685

Status : Not Answered

Chosen Option : --

Q.11 Use positive question tag for statement given below.
"She won't be late, _____?"

- Ans
- ☒ 1. will it?
 - ☒ 2. isn't she?
 - ☒ 3. will she?
 - ☒ 4. won't she?

Question ID : 630680385457
Option 1 ID : 6306801502645
Option 2 ID : 6306801502642
Option 3 ID : 6306801502643
Option 4 ID : 6306801502644
Status : Answered
Chosen Option : 3

Q.12 Select the most appropriate synonym of the given word.
Overlook

- Ans
- ☒ 1. Austere
 - ☒ 2. Pleasant
 - ☒ 3. Disregard
 - ☒ 4. Disenchant

Question ID : 630680385656
Option 1 ID : 6306801503384
Option 2 ID : 6306801503383
Option 3 ID : 6306801503382
Option 4 ID : 6306801503385
Status : Answered
Chosen Option : 3

Q.13 Select the most appropriate ANTONYM of the given word.

Circumlocution

- Ans
- ☒ 1. Verbosity
 - ☒ 2. Terseness
 - ☒ 3. Redundancy
 - ☒ 4. Verbiage

Question ID : 630680403546
Option 1 ID : 6306801573694
Option 2 ID : 6306801573696
Option 3 ID : 6306801573697
Option 4 ID : 6306801573695
Status : Answered
Chosen Option : 2

Comprehension:

In the following passage some words have been deleted. Fill in the blanks with the help of the alternatives given. Select the most appropriate option for each number.

No human being could have passed a happier (1) _____ than myself. My parents were possessed by the very spirit of kindness and (2) _____. We felt that they were not the tyrants to rule our lot according to their (3) _____, but the agents and creators of all the many delights which we enjoyed.

SubQuestion No : 14

Q.14 Select the most appropriate option to fill in the blank No. 1.

- Ans ☒ 1. school fair
 ☒ 2. classroom
 ☒ 3. adolescence
 ☒ 4. childhood

Question ID : 630680385609
Option 1 ID : 6306801503204
Option 2 ID : 6306801503205
Option 3 ID : 6306801503202
Option 4 ID : 6306801503203
Status : Answered
Chosen Option : 4

Comprehension:

In the following passage some words have been deleted. Fill in the blanks with the help of the alternatives given. Select the most appropriate option for each number.

No human being could have passed a happier (1) _____ than myself. My parents were possessed by the very spirit of kindness and (2) _____. We felt that they were not the tyrants to rule our lot according to their (3) _____, but the agents and creators of all the many delights which we enjoyed.

SubQuestion No : 15

Q.15 Select the most appropriate option to fill in the blank No. 2.

- Ans ☒ 1. indulgence
 ☒ 2. exclusion
 ☒ 3. brutality
 ☒ 4. gathering

Question ID : 630680385610
Option 1 ID : 6306801503208
Option 2 ID : 6306801503209
Option 3 ID : 6306801503206
Option 4 ID : 6306801503207
Status : Answered
Chosen Option : 1

Comprehension:

In the following passage some words have been deleted. Fill in the blanks with the help of the alternatives given. Select the most appropriate option for each number.

No human being could have passed a happier (1) _____ than myself. My parents were possessed by the very spirit of kindness and (2) _____. We felt that they were not the tyrants to rule our lot according to their (3) _____, but the agents and creators of all the many delights which we enjoyed.

SubQuestion No : 16

Q.16 Select the most appropriate option to fill in the blank No. 3.

Ans ☒ 1. blandness

☒ 2. caprice

☒ 3. routine

☒ 4. playground

Question ID : 630680385611

Option 1 ID : 6306801503211

Option 2 ID : 6306801503210

Option 3 ID : 6306801503212

Option 4 ID : 6306801503213

Status : Not Answered

Chosen Option : --

Q.17 From the options select the most suitable proverb for the sentence given below.

I can't stop investigating until I know where the donations are actually going, I know it isn't safe for me.

Ans ☒ 1. Blood is thicker than water.

☒ 2. Better to be poor and healthy than rich and sick.

☒ 3. Curiosity killed the cat.

☒ 4. Clothes do not make a man.

Question ID : 630680385637

Option 1 ID : 6306801503307

Option 2 ID : 6306801503308

Option 3 ID : 6306801503309

Option 4 ID : 6306801503306

Status : Answered

Chosen Option : 3



Q.18 Select the option to fill in the missing sentence that fits into the context of the passage.

- A. There are several rituals of death.
- B. When a man dies, it is taboo for his clan members to go to work.
- C. _____.
- D. Distant relatives do not work for two days.

Ans ☒ 1. If a member of the clan dies far from home, a lock of his hair is cut and brought back for the rituals.
☒ 2. His closest relatives will observe a five-day mourning period during which they will not do any work.
☒ 3. All the funeral meat is to be distributed before the body is buried.
☒ 4. Animals are killed and the meat is distributed to everyone in the clan.

Question ID : 630680403544
Option 1 ID : 6306801573687
Option 2 ID : 6306801573689
Option 3 ID : 6306801573686
Option 4 ID : 6306801573688
Status : Answered
Chosen Option : 2

Q.19 What is the one-word term used to describe:
"The act of speaking one's thoughts aloud alone."

Ans ☒ 1. Serenade
☒ 2. Monologue
☒ 3. Soliloquy
☒ 4. Dialogue

Question ID : 630680385724
Option 1 ID : 6306801503629
Option 2 ID : 6306801503627
Option 3 ID : 6306801503628
Option 4 ID : 6306801503626
Status : Answered
Chosen Option : 3

Q.20 Fill in the blank with the correct part of speech.
She walked _____ the bridge to reach the other side.

Ans ☒ 1. through
☒ 2. between
☒ 3. below
☒ 4. beside

Question ID : 630680385233
Option 1 ID : 6306801501819
Option 2 ID : 6306801501821
Option 3 ID : 6306801501818
Option 4 ID : 6306801501820
Status : Answered
Chosen Option : 1

Q.21 What is the one-word term used to describe:
"A person who prefers to be alone and avoids others as a religious discipline."

- Ans ☒ 1. Hermit
☐ 2. Introvert
☐ 3. Extrovert
☐ 4. Ambivert

Question ID : 630680385720
Option 1 ID : 6306801503613
Option 2 ID : 6306801503611
Option 3 ID : 6306801503610
Option 4 ID : 6306801503612
Status : Answered
Chosen Option : 2

Q.22 What is the one-word term used to describe:
"The art of beautiful handwriting."

- Ans ☐ 1. Typography
☐ 2. Hieroglyphs
☐ 3. Graphology
☒ 4. Calligraphy

Question ID : 630680385726
Option 1 ID : 6306801503635
Option 2 ID : 6306801503637
Option 3 ID : 6306801503636
Option 4 ID : 6306801503634
Status : Answered
Chosen Option : 4

Q.23 Select the word segment that substitutes the bracketed segment correctly and completes the sentence meaningfully.
The team's strategy was well-thought-out; they [efficiently coordinated] their movements, gaining a significant advantage over the opponents.

- Ans ☐ 1. hesitantly planned
☐ 2. clumsily stumbled through
☒ 3. expertly synchronized
☐ 4. spontaneously improvised

Question ID : 630680385723
Option 1 ID : 6306801503625
Option 2 ID : 6306801503622
Option 3 ID : 6306801503624
Option 4 ID : 6306801503623
Status : Answered
Chosen Option : 3

Q.24 Select the word segment that substitutes the bracketed segment correctly and completes the sentence meaningfully.
The young artist's abstract painting was [intriguing and enigmatic], leaving the viewers in awe.

- Ans**
- ☒ 1. colourful and vibrant
 - ☒ 2. confusing and chaotic
 - ☒ 3. beautiful and serene
 - ☒ 4. dull and lifeless

Question ID : 630680385717
Option 1 ID : 6306801503598
Option 2 ID : 6306801503600
Option 3 ID : 6306801503601
Option 4 ID : 6306801503599
Status : Answered
Chosen Option : 2

Q.25 Select the most appropriate synonym of the given word.
Subterfuge

- Ans**
- ☒ 1. Adequate
 - ☒ 2. Repetition
 - ☒ 3. Clown
 - ☒ 4. Deception

Question ID : 630680385652
Option 1 ID : 6306801503368
Option 2 ID : 6306801503366
Option 3 ID : 6306801503369
Option 4 ID : 6306801503367
Status : Not Answered
Chosen Option : --

