



Teachingninja.in



Latest Govt Job updates



Private Job updates



Free Mock tests available



Visit - teachingninja.in

DDA ASO

Previous Year Paper
08 Oct, 2023 Shift 3





DELHI DEVELOPMENT AUTHORITY
RECRUITMENT CELL
VIKAS SADAN, INA, NEW DELHI - 110023
(<https://www.dda.gov.in>)

Advertisement No. 02/2023/Recdt. Cell/Pers./DDA

Test Date	08/10/2023
Test Time	2:30 PM - 3:30 PM
Subject	Assistant Section Officer (ASO)

Section : General Intelligence and Reasoning

Q.1 A group of eight people P, Q, R, S, T, U, V, and W are standing in a straight line facing north. U is sitting fifth to the right of P and S is sitting to fifth to the right of T. T is immediate right of P. W is third to the left of S. Q is third to the right of V. V is immediate neighbor of P. Who is sitting third to the left of R?

- Ans
- ☒ 1. P
 - ☒ 2. Q
 - ☒ 3. U
 - ☒ 4. T

Question ID : 630680384817
Option 1 ID : 6306801500155
Option 2 ID : 6306801500156
Option 3 ID : 6306801500157
Option 4 ID : 6306801500154

Status : Answered

Chosen Option : 4

Q.2 If Pradeep is the only son of Raghurib, and Nitu is the daughter of Raghurib' son, then how is Pradeep related to Nitu?

- Ans
- ☒ 1. Father
 - ☒ 2. Brother
 - ☒ 3. Husband
 - ☒ 4. Son

Question ID : 630680384670
Option 1 ID : 6306801499566
Option 2 ID : 6306801499568
Option 3 ID : 6306801499569
Option 4 ID : 6306801499567

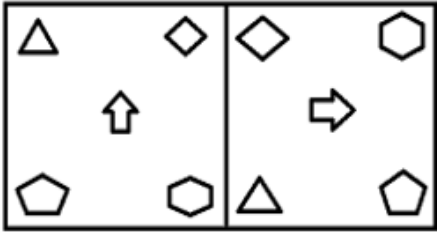
Status : Answered

Chosen Option : 1

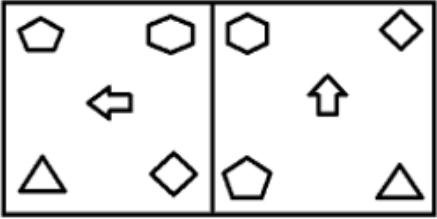
Q.3 Four figure-pairs have been given, out of which three are alike in some manner and one is different. Select the one that is different.

Ans

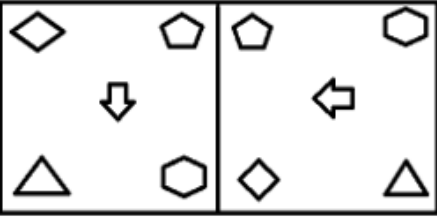
✗ 1.



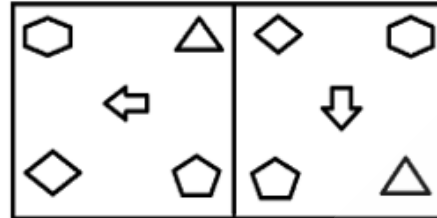
✗ 2.



✗ 3.



✓ 4.



Question ID : 630680403844

Option 1 ID : 6306801574862

Option 2 ID : 6306801574863

Option 3 ID : 6306801574864

Option 4 ID : 6306801574865

Status : Answered

Chosen Option : 4

Q.4 Four word pairs have been given, out of which three are alike in some manner and one is different. Select the odd word pair.

Ans ✓ 1. **SPLENDID : ORDINARY**

✗ 2. **INFURLATE : AROUSE**

✗ 3. **INTERROGATE : ASK**

✗ 4. **ANSWER : RETORT**

Question ID : 630680384505

Option 1 ID : 6306801498909

Option 2 ID : 6306801498906

Option 3 ID : 6306801498908

Option 4 ID : 6306801498907

Status : Answered

Chosen Option : 1

Q.5 In the following question three statements are given, followed by two conclusions numbered I and II. Assume three given statements to be true even if they seem to be at variance with commonly known facts and then decide which of the given conclusion logically follows from the two statements disregarding commonly known facts.

Statements:
All squares are triangles.
Some triangles are rectangles.
All rectangles are circles.
Conclusions:
I. Some circles are squares.
II. Some circles are triangles.

- Ans**
- ☒ 1. Neither conclusion I nor II follows
 - ☒ 2. Both conclusion I and II follow
 - ☒ 3. Only conclusion I follows
 - ☒ 4. Only conclusion II follows

Question ID : 630680384633
Option 1 ID : 6306801499421
Option 2 ID : 6306801499420
Option 3 ID : 6306801499418
Option 4 ID : 6306801499419
Status : Answered
Chosen Option : 4

Q.6 Read the following information and answer the question given below it :
During a film festival six movies A, B, C, D, E and F are to be shown, one on each day from Monday to Saturday. The schedule of the movies is to be in accordance with the following :
(i) A must be played a day before E.
(ii) C must not be played on Tuesday.
(iii) B must be played on the day following the day on which F is staged.
(iv) D must be played on Friday only and should not be immediately preceded by B.
(v) E must not be played on the last day of the schedule.
Which of the following movie is on Monday ?

- Ans**
- ☒ 1. F
 - ☒ 2. B
 - ☒ 3. E
 - ☒ 4. C

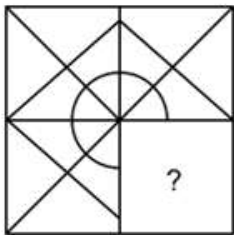
Question ID : 630680384812
Option 1 ID : 6306801500137
Option 2 ID : 6306801500135
Option 3 ID : 6306801500136
Option 4 ID : 6306801500134
Status : Answered
Chosen Option : 1

Q.7 How many symbols are there in the given series that are immediately preceded by a letter and immediately followed by a symbol?
B & C # O + P * L \$! S U ^ G

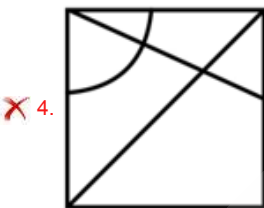
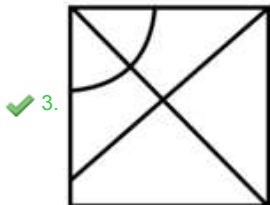
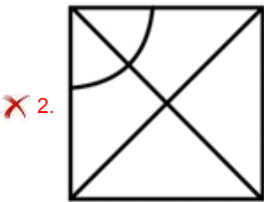
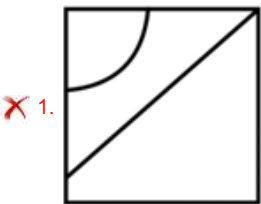
- Ans**
- ☒ 1. 2
 - ☒ 2. 3
 - ☒ 3. 4
 - ☒ 4. 1

Question ID : 630680384758
Option 1 ID : 6306801499921
Option 2 ID : 6306801499919
Option 3 ID : 6306801499920
Option 4 ID : 6306801499918
Status : Answered
Chosen Option : 4

Q.8 Which of the following answer figure completes the question figure?



Ans



Question ID : 630680384738

Option 1 ID : 6306801499838

Option 2 ID : 6306801499839

Option 3 ID : 6306801499841

Option 4 ID : 6306801499840

Status : Answered

Chosen Option : 3

Q.9 Which letter or number is 15th to the left of the letter or number which is 36th from the left?

Direction:

(LEFT) Z 3 X 8 V 3 T 9 R 5 P 1 N 4 L 6 J 7 H 9 F 3 D 8 B 8 T 9 R 3 F 7 W 1 T 8 (RIGHT)

- Ans ☒ 1. F
☐ 2. 9
☐ 3. 3
☐ 4. D

Question ID : 630680403826
Option 1 ID : 6306801574791
Option 2 ID : 6306801574790
Option 3 ID : 6306801574792
Option 4 ID : 6306801574793
Status : Answered
Chosen Option : 1

Q.10 In the following triad, each group of letters is related to the subsequent one following a certain logic.
LKTR - OPGI - PQHJ

Which of the following option follows the same logic?

- Ans ☐ 1. FPVX - ULEC - VMFE
☐ 2. RDTF - IWSU - JVTV
☒ 3. FPVX - UKEC - VLFD
☐ 4. RDTF - IWUS - IJLM

Question ID : 630680384795
Option 1 ID : 6306801500068
Option 2 ID : 6306801500066
Option 3 ID : 6306801500069
Option 4 ID : 6306801500067
Status : Answered
Chosen Option : 3

Q.11 How many such symbols are there in the above arrangement, each of which is immediately preceded by a number and immediately followed by a letter?

Direction:

(LEFT) A 4 B & 8 * A 9 C # X 8 % D 9 Z @ G & 6 Y 9 ^ 8 # G @ 5 D % 2 & 8 @ L (RIGHT)

- Ans ☐ 1. Seven
☐ 2. Five
☒ 3. Four
☐ 4. Six

Question ID : 630680403822
Option 1 ID : 6306801574777
Option 2 ID : 6306801574775
Option 3 ID : 6306801574774
Option 4 ID : 6306801574776
Status : Answered
Chosen Option : 3

Q.12 In the following question, a number series is given with one term missing. Choose the correct alternative that will continue the same pattern and fill in the blank spaces.
3, 8, 15, 24, __, 48, 63

- Ans**
- ☒ 1. 31
 - ☒ 2. 32
 - ☒ 3. 35
 - ☒ 4. 34

Question ID : 630680386190
Option 1 ID : 6306801505473
Option 2 ID : 6306801505471
Option 3 ID : 6306801505472
Option 4 ID : 6306801505470
Status : Answered
Chosen Option : 3

Q.13 Choose the figure similar to the question figure.



Ans

- ☒ 1.
- ☒ 2.
- ☒ 3.
- ☒ 4.

Question ID : 630680384743
Option 1 ID : 6306801499859
Option 2 ID : 6306801499860
Option 3 ID : 6306801499858
Option 4 ID : 6306801499861
Status : Answered
Chosen Option : 1

Q.14 Which of the following letter-number cluster will replace the question mark (?) in the given series?
AE2, EI2, IM1, MQ0, ?, UY1

- Ans
- ☒ 1. QV2
 - ☒ 2. QUI
 - ☒ 3. QVI
 - ☒ 4. QU0

Question ID : 630680384524
Option 1 ID : 6306801498984
Option 2 ID : 6306801498983
Option 3 ID : 6306801498985
Option 4 ID : 6306801498982
Status : Not Attempted and Marked For Review
Chosen Option : --

Q.15 Consider the following table where each letter is denoted by a symbol or a digit as shown.
Read the given conditions carefully and identify combinations that correctly represents '9-2@+358' based on the coding system given in the table and the conditions that follow.
Conditions:
(i) If the first element is an even digit and the last element is a symbol, both are to be coded as the code for the even digit.
(ii) If the first element is a symbol and the last element is an odd digit, their codes are to be interchanged.
(iii) If the first element is an odd digit and the last element is an even digit, both are to be coded as the code for the odd digit.

Digit / Symbol	@	9	2	-	\$	3	2	+	6	8	5
Letter	G	S	R	U	C	D	E	I	B	P	A

- Ans
- ☒ 1. SUGRIDAS
 - ☒ 2. SURGIDAS
 - ☒ 3. PURGIDPB
 - ☒ 4. PIRGUDPB

Question ID : 630680384584
Option 1 ID : 6306801499222
Option 2 ID : 6306801499223
Option 3 ID : 6306801499225
Option 4 ID : 6306801499224
Status : Not Answered
Chosen Option : --

Q.16 In this question, a statement has been given followed by two courses of action numbered I and II. Assuming that all information in the statement is true, analyse the actions together and determine whether any of them logically and definitely follow(s) from the information given in the statement.
Statement:
The school property was destroyed because of a fight between two groups of students.
Courses of actions:
I) Fine must be collected from the students responsible.
II) Strict disciplinary action must be taken against the students involved.

- Ans
- ☒ 1. Only I follows
 - ☒ 2. Neither I nor II follows
 - ☒ 3. Both I and II follows
 - ☒ 4. Only II follows

Question ID : 630680384685
Option 1 ID : 6306801499626
Option 2 ID : 6306801499629
Option 3 ID : 6306801499628
Option 4 ID : 6306801499627
Status : Answered
Chosen Option : 3

Q.17 If $M * N$ means "M is father of N",
 $M \div N$ means "M is daughter of N",
 $M + N$ means "M is sister of N", and
 $M - N$ means "M is Husband of N",
 which of the following indicates "A is mother of C" ?

- Ans ☒ 1. $C + B \div A - F$
☒ 2. $C + B \div A * D$
☒ 3. $E * C \div A$
☒ 4. $A * D + C$

Question ID : 630680384772
 Option 1 ID : 6306801499975
 Option 2 ID : 6306801499974
 Option 3 ID : 6306801499976
 Option 4 ID : 6306801499977
 Status : Answered
 Chosen Option : 3

Q.18 If the position of second and the third digits within each number are interchanged, what will be the sum of the first and third digit of the third highest number?
 3865 5497 5712 1968 5251 2769

- Ans ☒ 1. 8
☒ 2. 15
☒ 3. 12
☒ 4. 7

Question ID : 630680386156
 Option 1 ID : 6306801505335
 Option 2 ID : 6306801505334
 Option 3 ID : 6306801505336
 Option 4 ID : 6306801505337
 Status : Not Attempted and Marked For Review
 Chosen Option : --

Q.19 How many pairs of letters in the word "DEVELOPMENT" have the same number of letters between them as in the English alphabet (both forward and backward)?

- Ans ☒ 1. Seven
☒ 2. Five
☒ 3. Two
☒ 4. Four

Question ID : 630680384549
 Option 1 ID : 6306801499085
 Option 2 ID : 6306801499084
 Option 3 ID : 6306801499082
 Option 4 ID : 6306801499083
 Status : Not Answered
 Chosen Option : --

Q.20 Select the option that is related to the third number-letter cluster in the same way as the second number-letter cluster is related to the first number-letter cluster:

WRITE : ETRWI :: COASTER : ?

- Ans** ☒ 1. RETAOCS
☒ 2. OCSAETR
☒ 3. RETSAOC
☒ 4. RETOCSA

Question ID : 630680384690
Option 1 ID : 6306801499646
Option 2 ID : 6306801499649
Option 3 ID : 6306801499647
Option 4 ID : 6306801499648
Status : Answered
Chosen Option : 1

Q.21 Find wrong number in the series:

5, 2.5, 3.75, 9.375, 33.75, 147.65625, 812.109375

- Ans** ☒ 1. 127.65
☒ 2. 3.75
☒ 3. 9.37
☒ 4. 33.75

Question ID : 630680384600
Option 1 ID : 6306801499288
Option 2 ID : 6306801499286
Option 3 ID : 6306801499287
Option 4 ID : 6306801499289
Status : Not Answered
Chosen Option : --

Q.22 In the following question three statements are given, followed by two conclusions numbered I and II. Assume three given statements to be true even if they seem to be at variance with commonly known facts and then decide which of the given conclusion logically follows from the two statements disregarding commonly known facts.

Statements:

All books are dictionaries.

Some dictionaries are file.

All files are papers

Conclusions:

I. Some papers are books.

II. Some papers are dictionary.

- Ans** ☒ 1. If conclusion I follow
☒ 2. If conclusion II follows
☒ 3. If neither conclusion I nor II follows
☒ 4. If both conclusion I and II follows

Question ID : 630680384828
Option 1 ID : 6306801500198
Option 2 ID : 6306801500199
Option 3 ID : 6306801500201
Option 4 ID : 6306801500200
Status : Answered
Chosen Option : 4

Q.23 If pencil is called "keyboard," keyboard is called "book," book is called "chair," and chair is called "eraser," then what is used for writing?

- Ans**
- ☒ 1. Book
 - ☒ 2. Eraser
 - ☒ 3. Keyboard
 - ☒ 4. Chair

Question ID : 630680384579
Option 1 ID : 6306801499203
Option 2 ID : 6306801499205
Option 3 ID : 6306801499202
Option 4 ID : 6306801499204
Status : Answered
Chosen Option : 3

Q.24 Four word pairs have been given, out of which three are alike in some manner and one is different. Select the odd word pair.

- Ans**
- ☒ 1. BANGLADESH : DHAKA
 - ☒ 2. CHINA : THIMPU
 - ☒ 3. JAPAN : TOKYO
 - ☒ 4. AFGHANISTAN : KABUL

Question ID : 630680384710
Option 1 ID : 6306801499727
Option 2 ID : 6306801499728
Option 3 ID : 6306801499729
Option 4 ID : 6306801499726
Status : Answered
Chosen Option : 2

Q.25 Identify the term which does not follow the pattern in the given series.

3T2, 6R4, 9P6, 12N8, 16K10, 18J12

- Ans**
- ☒ 1. 9P6
 - ☒ 2. 18J12
 - ☒ 3. 12N8
 - ☒ 4. 16K10

Question ID : 630680386210
Option 1 ID : 6306801505553
Option 2 ID : 6306801505551
Option 3 ID : 6306801505550
Option 4 ID : 6306801505552
Status : Answered
Chosen Option : 4

Section : General Awareness

Q.1 Who founded the Brahmo Samaj, a socio-religious reform movement that aimed to promote monotheism and eradicate social evils?

- Ans ☒ 1. Raja Ram Mohan Roy
- ☐ 2. Swami Vivekananda
- ☐ 3. Jyotirao Phule
- ☐ 4. Dayananda Saraswati

Question ID : 630680386482
Option 1 ID : 6306801506639
Option 2 ID : 6306801506638
Option 3 ID : 6306801506641
Option 4 ID : 6306801506640
Status : Answered
Chosen Option : 1

Q.2 Which dance form is closely associated with the state of Odisha in India, known for its graceful movements and elaborate costumes?

- Ans ☐ 1. Bharatanatyam
- ☐ 2. Kathakali
- ☐ 3. Manipuri
- ☒ 4. Odissi

Question ID : 630680386421
Option 1 ID : 6306801506394
Option 2 ID : 6306801506395
Option 3 ID : 6306801506397
Option 4 ID : 6306801506396
Status : Answered
Chosen Option : 4

Q.3 Which religion originated in India and is characterized by the belief in karma, dharma, and the cycle of birth and death?

- Ans ☒ 1. Hinduism
- ☐ 2. Christianity
- ☐ 3. Islam
- ☐ 4. Buddhism

Question ID : 630680386466
Option 1 ID : 6306801506574
Option 2 ID : 6306801506577
Option 3 ID : 6306801506576
Option 4 ID : 6306801506575
Status : Answered
Chosen Option : 1

Q.4 Who is the author of the autobiography "The Story of My Experiments with Truth," which provides insights into the life and philosophy of a prominent Indian leader?

- Ans
- ☒ 1. Rabindranath Tagore
 - ☒ 2. R.K. Narayan
 - ☒ 3. Mahatma Gandhi
 - ☒ 4. Arundhati Roy

Question ID : 630680386415
Option 1 ID : 6306801506370
Option 2 ID : 6306801506372
Option 3 ID : 6306801506371
Option 4 ID : 6306801506373
Status : Answered
Chosen Option : 3

Q.5 Which scheme gives Interest subsidy on educational loans for overseas studies?

- Ans
- ☒ 1. Seekho Aur Kamao
 - ☒ 2. Padho Pardesh
 - ☒ 3. Naya Savera
 - ☒ 4. 'Nai Manzil

Question ID : 630680386402
Option 1 ID : 6306801506319
Option 2 ID : 6306801506320
Option 3 ID : 6306801506318
Option 4 ID : 6306801506321
Status : Answered
Chosen Option : 2

Q.6 Who was the Man of the match in Word Test Championship between India and Australia in June 23?

- Ans
- ☒ 1. Steve Smith
 - ☒ 2. Ravindra Jadeja
 - ☒ 3. Travis Head
 - ☒ 4. Rohit Sharma

Question ID : 630680386410
Option 1 ID : 6306801506352
Option 2 ID : 6306801506351
Option 3 ID : 6306801506353
Option 4 ID : 6306801506350
Status : Answered
Chosen Option : 1

Q.7 Which of the Banks is known as the Central Bank of India?

- Ans
- ☒ 1. State Bank of India (SBI)
 - ☒ 2. NABARD
 - ☒ 3. Reserve Bank of India (RBI)
 - ☒ 4. ICICI Bank

Question ID : 630680384285
Option 1 ID : 6306801498028
Option 2 ID : 6306801498029
Option 3 ID : 6306801498027
Option 4 ID : 6306801498026
Status : Answered
Chosen Option : 3

Q.8 In which year was the Banaras Hindu University established?

- Ans
- ☒ 1. 1934
 - ☒ 2. 1913
 - ☒ 3. 1916
 - ☒ 4. 1920

Question ID : 630680384336
Option 1 ID : 6306801498231
Option 2 ID : 6306801498233
Option 3 ID : 6306801498232
Option 4 ID : 6306801498230
Status : Not Answered
Chosen Option : --

Q.9 Which Indian state is known for its successful implementation of the "Jal Shakti Abhiyan" to conserve water resources?

- Ans
- ☒ 1. Maharashtra
 - ☒ 2. Tamil Nadu
 - ☒ 3. Kerala
 - ☒ 4. Rajasthan

Question ID : 630680384417
Option 1 ID : 6306801498555
Option 2 ID : 6306801498557
Option 3 ID : 6306801498556
Option 4 ID : 6306801498554
Status : Not Answered
Chosen Option : --

Q.10 When was first 5G Services was launched in India?

- Ans
- ☒ 1. Sept'2022
 - ☒ 2. Oct'2022
 - ☒ 3. May'2022
 - ☒ 4. Apr'2022

Question ID : 630680386397
Option 1 ID : 6306801506299
Option 2 ID : 6306801506298
Option 3 ID : 6306801506301
Option 4 ID : 6306801506300
Status : Answered
Chosen Option : 1

Q.11 Who is known as the Diamond of India?

- Ans
- ☒ 1. Gopal Krishna Gokhale
 - ☒ 2. Mahatma Gandhi
 - ☒ 3. Lal Bahadur Shastri
 - ☒ 4. Sardar Vallabhbhai Patel

Question ID : 630680384333
Option 1 ID : 6306801498220
Option 2 ID : 6306801498219
Option 3 ID : 6306801498218
Option 4 ID : 6306801498221
Status : Answered
Chosen Option : 1

Q.12 The "Bharatmala Pariyojana" is a flagship infrastructure project aimed at developing:

- Ans ☒ 1. High-speed railways
☒ 2. Road connectivity
☒ 3. Digital infrastructure
☒ 4. Coastal and inland waterways

Question ID : 630680384190
Option 1 ID : 6306801497652
Option 2 ID : 6306801497651
Option 3 ID : 6306801497653
Option 4 ID : 6306801497650
Status : Not Answered
Chosen Option : --

Q.13 Which language is one of the prominent languages spoken in the state of Karnataka?

- Ans ☒ 1. Telegu
☒ 2. Tamil
☒ 3. Bengali
☒ 4. Kannada

Question ID : 630680386434
Option 1 ID : 6306801506449
Option 2 ID : 6306801506447
Option 3 ID : 6306801506446
Option 4 ID : 6306801506448
Status : Answered
Chosen Option : 4

Q.14 Which type of forest is dominant in the northeastern region of India, characterized by high rainfall and evergreen trees?

- Ans ☒ 1. Tropical Rainforest
☒ 2. Alpine Forest
☒ 3. Mangrove Forest
☒ 4. Deciduous Forest

Question ID : 630680386457
Option 1 ID : 6306801506538
Option 2 ID : 6306801506540
Option 3 ID : 6306801506541
Option 4 ID : 6306801506539
Status : Answered
Chosen Option : 2

Q.15 Which of the following measures represents the total income earned by individuals and businesses within a country's borders during a given period?

- Ans ☒ 1. Net National Product
☒ 2. Gross Domestic Product
☒ 3. National Income
☒ 4. Gross National Product

Question ID : 630680384409
Option 1 ID : 6306801498525
Option 2 ID : 6306801498523
Option 3 ID : 6306801498524
Option 4 ID : 6306801498522
Status : Marked For Review
Chosen Option : 2

Q.16 Who among the following won the Arjuna Award in The National Sports Awards,2022 for Weightlifting?

- Ans ☒ 1. Achinta Sheuli
☒ 2. Shri Vikas Thakur
☒ 3. Lovepreet Singh
☒ 4. Jeremy Lalrinnunga

Question ID : 630680384260
Option 1 ID : 6306801497926
Option 2 ID : 6306801497928
Option 3 ID : 6306801497929
Option 4 ID : 6306801497927
Status : Not Answered
Chosen Option : --

Q.17 The "National Skill Development Corporation" (NSDC) was established to enhance the skills of the Indian workforce. Which ministry set up the NSDC?

- Ans ☒ 1. Ministry of Finance
☒ 2. Ministry of Commerce and Industry
☒ 3. Ministry of Skill Development and Entrepreneurship
☒ 4. Ministry of Human Resource Development

Question ID : 630680384197
Option 1 ID : 6306801497679
Option 2 ID : 6306801497678
Option 3 ID : 6306801497680
Option 4 ID : 6306801497681
Status : Answered
Chosen Option : 3

Q.18 On which date current chairman of ISRO assumed the charge of Secretary, Department of Space and Chairman, Space Commission?

- Ans ☒ 1. 14 January 2022
☒ 2. 4 January 2022
☒ 3. 24 January 2022
☒ 4. 14 January 2021

Question ID : 630680386394
Option 1 ID : 6306801506289
Option 2 ID : 6306801506287
Option 3 ID : 6306801506288
Option 4 ID : 6306801506286
Status : Not Answered
Chosen Option : --

Q.19 When was the first battle of Panipat fought?

- Ans ☒ 1. 1620 AD
☒ 2. 1777 AD
☒ 3. 1526 AD
☒ 4. 1857 AD

Question ID : 630680384122
Option 1 ID : 6306801497379
Option 2 ID : 6306801497378
Option 3 ID : 6306801497380
Option 4 ID : 6306801497381
Status : Answered
Chosen Option : 1

Q.20 Which festival of India is celebrated by Sikhs to commemorate the birth of Guru Nanak Dev Ji, the founder of Sikhism?

- Ans ☒ 1. Onam
☒ 2. Holi
☒ 3. Gurpurab
☒ 4. Eid

Question ID : 630680386426
Option 1 ID : 6306801506417
Option 2 ID : 6306801506415
Option 3 ID : 6306801506414
Option 4 ID : 6306801506416
Status : Answered
Chosen Option : 3

Q.21 Which of the following countries is ranked the top position in Child Marriages?

- Ans ☒ 1. Brazil
☒ 2. India
☒ 3. Bangladesh
☒ 4. Nigeria

Question ID : 630680384253
Option 1 ID : 6306801497900
Option 2 ID : 6306801497899
Option 3 ID : 6306801497898
Option 4 ID : 6306801497901
Status : Not Answered
Chosen Option : --

Q.22 How many climate zones are there in India?

- Ans ☒ 1. 4
☒ 2. 3
☒ 3. 5
☒ 4. 6

Question ID : 630680386462
Option 1 ID : 6306801506559
Option 2 ID : 6306801506560
Option 3 ID : 6306801506558
Option 4 ID : 6306801506561
Status : Not Answered
Chosen Option : --

Q.23 Which among the following is one of the Kingdoms of South India during the medieval period 700AD-1857AD?

- Ans ☒ 1. Pandyas
☒ 2. Chola
☒ 3. Bhamini
☒ 4. Marathas

Question ID : 630680384117
Option 1 ID : 6306801497358
Option 2 ID : 6306801497361
Option 3 ID : 6306801497359
Option 4 ID : 6306801497360
Status : Not Answered
Chosen Option : --

Q.24 In which of the following states is Onam celebrated in India?

- Ans
- ☒ 1. Assam
 - ☒ 2. Gujrat
 - ☒ 3. Goa
 - ☒ 4. Kerala

Question ID : 630680384275
Option 1 ID : 6306801497989
Option 2 ID : 6306801497987
Option 3 ID : 6306801497986
Option 4 ID : 6306801497988
Status : Answered
Chosen Option : 4

Q.25 What is the literacy rate of India as per 2011 census?

- Ans
- ☒ 1. 71.01%
 - ☒ 2. 78.33%
 - ☒ 3. 74.04%
 - ☒ 4. 65.46%

Question ID : 630680384317
Option 1 ID : 6306801498157
Option 2 ID : 6306801498156
Option 3 ID : 6306801498154
Option 4 ID : 6306801498155
Status : Not Attempted and Marked For Review
Chosen Option : --

Section : Quantitative Aptitude

Q.1 By selling 50 pencils, a shopkeeper gains the selling price of 10 pencils. What is his gain percentage ?

- Ans
- ☒ 1. 35%
 - ☒ 2. 20%
 - ☒ 3. 25%
 - ☒ 4. 30%

Question ID : 630680401830
Option 1 ID : 6306801567093
Option 2 ID : 6306801567090
Option 3 ID : 6306801567091
Option 4 ID : 6306801567092
Status : Answered
Chosen Option : 3

Q.2 Simplify:

$$\sqrt{728}$$

- Ans
- ☒ 1. $\sqrt{91}$
 - ☒ 2. $2\sqrt{13 \times 14}$
 - ☒ 3. $2\sqrt{91}$
 - ☒ 4. $\sqrt{13 \times 14}$

Question ID : 630680401810

Option 1 ID : 6306801567012

Option 2 ID : 6306801567011

Option 3 ID : 6306801567013

Option 4 ID : 6306801567010

Status : Answered

Chosen Option : 2

Q.3 If $(1 + \tan A)(1 + \tan B) = 2$, then the value of $(A + B)$ is:

- Ans
- ☒ 1. $\frac{\pi}{6}$
 - ☒ 2. $\frac{\pi}{4}$
 - ☒ 3. π
 - ☒ 4. $\frac{\pi}{2}$

Question ID : 630680403880

Option 1 ID : 6306801575009

Option 2 ID : 6306801575008

Option 3 ID : 6306801575006

Option 4 ID : 6306801575007

Status : Not Answered

Chosen Option : --

Q.4 What is the value of $(44^3 + 55^3 - 99^3)$?

- Ans
- ☒ 1. -718740
 - ☒ 2. 716740
 - ☒ 3. 718740
 - ☒ 4. -716740

Question ID : 630680401782

Option 1 ID : 6306801566899

Option 2 ID : 6306801566900

Option 3 ID : 6306801566901

Option 4 ID : 6306801566898

Status : Answered

Chosen Option : 1

Q.5 Milk in a rectangular big vessel having base 60 m by 60 m is 8 m deep. In what time can the milk be emptied by a pipe of which the cross section is a square of side 20 cm, if the milk runs through the pipe at the rate of 10 km/hr.

- Ans**
- ☒ 1. 60 hours
 - ☒ 2. 62 hours
 - ☒ 3. 72 hours
 - ☒ 4. 70 hours

Question ID : 630680401807
Option 1 ID : 6306801566998
Option 2 ID : 6306801567000
Option 3 ID : 6306801567001
Option 4 ID : 6306801566999
Status : Not Answered
Chosen Option : --

Q.6 The area of a rhombus shaped garden is 840 m^2 and its one diagonal is 42 m. What is the cost of fencing the garden at ₹60 per m?

- Ans**
- ☒ 1. ₹6,720
 - ☒ 2. ₹6,840
 - ☒ 3. ₹6,960
 - ☒ 4. ₹6,900

Question ID : 630680403868
Option 1 ID : 6306801574958
Option 2 ID : 6306801574959
Option 3 ID : 6306801574961
Option 4 ID : 6306801574960
Status : Answered
Chosen Option : 3

Q.7 Find the radius of a sphere whose surface area is 294 cm^2 .

- Ans**
- ☒ 1. 4.84 cm
 - ☒ 2. 3.84 cm
 - ☒ 3. 4.48 cm
 - ☒ 4. 3.48 cm

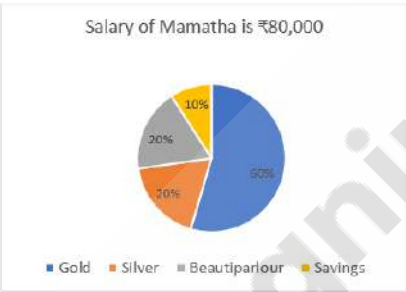
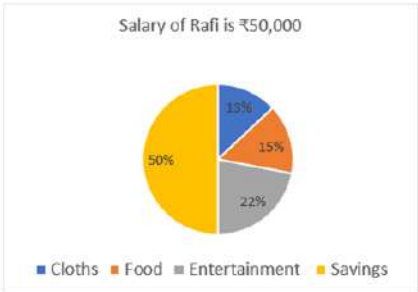
Question ID : 630680401799
Option 1 ID : 6306801566966
Option 2 ID : 6306801566967
Option 3 ID : 6306801566968
Option 4 ID : 6306801566969
Status : Not Answered
Chosen Option : --

Q.8 In a Cricket team, there are 5 players with average age 45 years and 6 players with average age 35 years. What is the average age of the Cricket team ?

- Ans**
- ☒ 1. 37
 - ☒ 2. 39
 - ☒ 3. 38
 - ☒ 4. 40

Question ID : 630680401787
Option 1 ID : 6306801566921
Option 2 ID : 6306801566919
Option 3 ID : 6306801566920
Option 4 ID : 6306801566918
Status : Answered
Chosen Option : 4

Q.9 Study the given chart and answer the question that follows.
The given chart represents a couple, Rafi and Mamatha whose salaries, expenditures and savings are depicted.
What is the ratio of expenditure on entertainment by Rafi and savings of Mamatha?



- Ans**
- ☒ 1. 11 : 9
 - ☒ 2. 9 : 11
 - ☒ 3. 11 : 8
 - ☒ 4. 8 : 11

Question ID : 630680403855
Option 1 ID : 6306801574906
Option 2 ID : 6306801574908
Option 3 ID : 6306801574907
Option 4 ID : 6306801574909
Status : Answered
Chosen Option : 3

Q.10 Find the ratio of average marks obtained by Ramesh and Mahesh from the given table.

Student Name	English	Mathematics	Science
Ramesh	63	65	55
Naresh	45	66	58
Mahesh	62	54	67
Venkatesh	49	98	73

- Ans**
- ✓ 1. 1 : 1
 - ✗ 2. 2 : 1
 - ✗ 3. 3 : 2
 - ✗ 4. 1 : 2

Question ID : 630680403852
Option 1 ID : 6306801574894
Option 2 ID : 6306801574897
Option 3 ID : 6306801574896
Option 4 ID : 6306801574895
Status : Answered
Chosen Option : 1

Q.11 If the volume of a cylinder is 575 cm³ and height of the cylinder is 5 cm. Find the radius of the cylinder.

- Ans**
- ✗ 1. 5.05 cm
 - ✗ 2. 6 cm
 - ✓ 3. 6.05 cm
 - ✗ 4. 5 cm

Question ID : 630680401804
Option 1 ID : 6306801566988
Option 2 ID : 6306801566987
Option 3 ID : 6306801566986
Option 4 ID : 6306801566989
Status : Answered
Chosen Option : 3

Q.12 The expenditure of family A per month is ₹84,000. The expenditure of family B per month is ₹72,000. The expenditure of family A decreased by 6% the next month and expenditure of family B increased by 2%. What is the difference between the new expenditures of A and B?

- Ans**
- ✓ 1. ₹5,520
 - ✗ 2. ₹5,240
 - ✗ 3. ₹5,495
 - ✗ 4. ₹5,080

Question ID : 630680403864
Option 1 ID : 6306801574942
Option 2 ID : 6306801574944
Option 3 ID : 6306801574943
Option 4 ID : 6306801574945
Status : Answered
Chosen Option : 1

Q.13 If a polygon has 9 diagonals, then the number of sides of that polygon is:

- Ans**
- ☒ 1. 9
 - ☒ 2. 7
 - ☒ 3. 8
 - ☒ 4. 6

Question ID : 630680403870

Option 1 ID : 6306801574969

Option 2 ID : 6306801574967

Option 3 ID : 6306801574968

Option 4 ID : 6306801574966

Status : Answered

Chosen Option : 4

Q.14 Two pipes K and L can fill the tank in 50 min. and 80 min. respectively. There is an another outlet M. If K,L and M are opened together, the tank is full in 40 min. How many time will be taken by outlet M to empty the full tank ?

- Ans**
- ☒ 1. approx. 133 min.
 - ☒ 2. approx. 123 min.
 - ☒ 3. approx. 153 min.
 - ☒ 4. approx. 143 min.

Question ID : 630680401846

Option 1 ID : 6306801567155

Option 2 ID : 6306801567154

Option 3 ID : 6306801567157

Option 4 ID : 6306801567156

Status : Answered

Chosen Option : 1

Q.15 In an election between two candidates, 80% of the voters cast their votes, out of which 5% of the votes were declared invalid. A candidate got 4788 votes which were 60% of the total valid votes. The total number of voters enrolled in that election was:

- Ans**
- ☒ 1. 10,500
 - ☒ 2. 10,000
 - ☒ 3. 10,200
 - ☒ 4. 10,800

Question ID : 630680403862

Option 1 ID : 6306801574936

Option 2 ID : 6306801574934

Option 3 ID : 6306801574935

Option 4 ID : 6306801574937

Status : Not Answered

Chosen Option : --

Q.16 Ravi wants to purchase a washing machine and checks the rating of the product that is $\frac{7}{10}$ for features and $\frac{9}{10}$ for durability. Based on his requirement Ravi gives a weightage of 70% to features and 50% for durability. Find the final rating for washing machine ?

Ans

☒ 1. $\frac{9.0}{10}$

☒ 2. $\frac{8.0}{10}$

☒ 3. $\frac{9.4}{10}$

☒ 4. $\frac{8.4}{10}$

Question ID : 630680401788

Option 1 ID : 6306801566922

Option 2 ID : 6306801566924

Option 3 ID : 6306801566923

Option 4 ID : 6306801566925

Status : Not Answered

Chosen Option : --

Q.17 If $a + \frac{1}{a} = 0$, find the value of $a^2 + \frac{1}{a^2}$.

Ans

☒ 1. 1

☒ 2. 2

☒ 3. -2

☒ 4. -1

Question ID : 630680401776

Option 1 ID : 6306801566874

Option 2 ID : 6306801566876

Option 3 ID : 6306801566877

Option 4 ID : 6306801566875

Status : Answered

Chosen Option : 3

Q.18 Simplify:

$$3 \div 16 + 1.4 \times \frac{1}{2} - \{1 \div 10 + (1 - 0.9)\}$$

Ans

✗ 1. $\frac{16}{11}$

✗ 2. $\frac{15}{11}$

✗ 3. $\frac{11}{15}$

✓ 4. $\frac{11}{16}$

Question ID : 630680401813

Option 1 ID : 6306801567025

Option 2 ID : 6306801567023

Option 3 ID : 6306801567022

Option 4 ID : 6306801567024

Status : Answered

Chosen Option : 4

Q.19 Find the products of $(1 + xyz)$ and $(1 - xyz + x^2y^2z^2)$.

Ans

✗ 1. $1 - x^3y^3z^3$

✗ 2. $1 + x^2y^2z^2$

✗ 3. $1 - x^2y^2z^2$

✓ 4. $1 + x^3y^3z^3$

Question ID : 630680401779

Option 1 ID : 6306801566888

Option 2 ID : 6306801566887

Option 3 ID : 6306801566886

Option 4 ID : 6306801566889

Status : Answered

Chosen Option : 4

Q.20 An arc of a circle is of length 6π cm and the sector it bounds has an area of 21π cm². What is the area of the circle (in cm²), excluding the area of the sector?

Ans

✗ 1. 21π

✓ 2. 28π

✗ 3. 14π

✗ 4. 30π

Question ID : 630680403866

Option 1 ID : 6306801574951

Option 2 ID : 6306801574952

Option 3 ID : 6306801574950

Option 4 ID : 6306801574953

Status : Not Answered

Chosen Option : --

Q.21 Ram and Jyoti can do a job in 10 hours together. Jyoti alone can do the same job in 15 hours. In how many hours can Ram do this job alone?

- Ans**
- ☒ 1. 20 hours
 - ☒ 2. 30 hours
 - ☒ 3. 50 hours
 - ☒ 4. 40 hours

Question ID : 630680401843
Option 1 ID : 6306801567142
Option 2 ID : 6306801567143
Option 3 ID : 6306801567145
Option 4 ID : 6306801567144
Status : Answered
Chosen Option : 2

Q.22 The ratio of the number of boys and girls in a school is 3 : 2. If 15% of the boys and 20% of the girls are scholarship holders, what percentage of the students do NOT get the scholarship?

- Ans**
- ☒ 1. 82%
 - ☒ 2. 86%
 - ☒ 3. 84%
 - ☒ 4. 83%

Question ID : 630680403876
Option 1 ID : 6306801574990
Option 2 ID : 6306801574992
Option 3 ID : 6306801574991
Option 4 ID : 6306801574993
Status : Answered
Chosen Option : 4

Q.23 The equal and parallel side of a quadrilateral is 6 cm and altitude corresponding to given side is 7 cm. Find the area of quadrilateral.

- Ans**
- ☒ 1. 24 cm²
 - ☒ 2. 42 cm²
 - ☒ 3. 24 cm
 - ☒ 4. 42 cm

Question ID : 630680401796
Option 1 ID : 6306801566955
Option 2 ID : 6306801566957
Option 3 ID : 6306801566954
Option 4 ID : 6306801566956
Status : Answered
Chosen Option : 2

Q.24 The ratio of acid and water in a solution of 90 litres is 7 : 11. How much water (in litres) should be mixed in this solution so that the ratio of acid and water in the resulting solution becomes 2 : 5?

- Ans**
- ☒ 1. 32
 - ☒ 2. 30
 - ☒ 3. 32.5
 - ☒ 4. 30.5

Question ID : 630680403874
Option 1 ID : 6306801574984
Option 2 ID : 6306801574982
Option 3 ID : 6306801574983
Option 4 ID : 6306801574985
Status : Answered
Chosen Option : 3

Q.25 A fruit vendor buys apples at a score for ₹100 and retails them at a dozen for ₹78. Did he gain or loss and what % was his loss or gain ?

- Ans**
- ☒ 1. 30%, Profit
 - ☒ 2. 20%, Loss
 - ☒ 3. 10%, Profit
 - ☒ 4. 40%, Loss

Question ID : 630680401834
Option 1 ID : 6306801567108
Option 2 ID : 6306801567107
Option 3 ID : 6306801567106
Option 4 ID : 6306801567109
Status : Not Answered
Chosen Option : --

Section : English Comprehension

Q.1 Select the option that can be used as a one-word substitute for the given group of words.

Events presented in order of occurrence

- Ans**
- ☒ 1. Chronology
 - ☒ 2. Anthology
 - ☒ 3. Doxology
 - ☒ 4. Terminology

Question ID : 630680403671
Option 1 ID : 6306801574174
Option 2 ID : 6306801574176
Option 3 ID : 6306801574177
Option 4 ID : 6306801574175
Status : Answered
Chosen Option : 1

Q.2 Select the most appropriate ANTONYM of the given word.

Admonish

- Ans ☒ 1. Chastise
☒ 2. Reprimand
☒ 3. Compliment
☒ 4. Reprove

Question ID : 630680403678
Option 1 ID : 6306801574202
Option 2 ID : 6306801574205
Option 3 ID : 6306801574204
Option 4 ID : 6306801574203
Status : Answered
Chosen Option : 3

Q.3 Fill in the blank with the most appropriate option.
In the days since our talk, things have started to _____ for the Teachout campaign.

- Ans ☒ 1. give out
☒ 2. go in
☒ 3. take over
☒ 4. look up

Question ID : 630680385577
Option 1 ID : 6306801503088
Option 2 ID : 6306801503086
Option 3 ID : 6306801503087
Option 4 ID : 6306801503089
Status : Answered
Chosen Option : 4



Comprehension:

Read the passage carefully and choose the best answer to each question out of the four alternatives.

The history of Native Americans is one of rich cultural diversity and resilience, dating back thousands of years before the arrival of European settlers. The indigenous peoples of North America inhabited a vast range of territories, each with unique traditions, languages, and belief systems.

For countless generations, Native Americans lived in harmony with the land, relying on hunting, fishing, and agriculture for sustenance. They developed intricate social structures and artistic expressions that celebrated their deep connection to nature.

However, the arrival of European colonists in the 15th century brought significant challenges to the Native American way of life. Forced removal from ancestral lands, disease, and conflict resulted in the tragic loss of millions of lives and the disruption of their cultures.

Despite enduring centuries of adversity and systemic oppression, Native Americans have shown remarkable resilience and continue to preserve their heritage and traditions. Efforts to reclaim ancestral lands, revitalize languages, and promote cultural awareness are integral to their ongoing story.

Today, Native Americans contribute to the diverse tapestry of American society while advocating for their rights, recognition, and the protection of their unique cultural identities. Acknowledging and respecting the histories and contributions of Native Americans are vital steps toward fostering understanding and appreciation for their enduring legacy.


SubQuestion No : 4

Q.4 What tone does the passage adopt when describing Native Americans?

Ans  **1. Reverential and Respectful**

 **2. Critical and Judgemental**

 **3. Sympathetic and Emotional**

 **4. Indifferent and Unconcerned**

Question ID : **630680385760**

Option 1 ID : **6306801503759**

Option 2 ID : **6306801503760**

Option 3 ID : **6306801503761**

Option 4 ID : **6306801503758**

Status : **Answered**

Chosen Option : **1**



Comprehension:

Read the passage carefully and choose the best answer to each question out of the four alternatives.

The history of Native Americans is one of rich cultural diversity and resilience, dating back thousands of years before the arrival of European settlers. The indigenous peoples of North America inhabited a vast range of territories, each with unique traditions, languages, and belief systems.

For countless generations, Native Americans lived in harmony with the land, relying on hunting, fishing, and agriculture for sustenance. They developed intricate social structures and artistic expressions that celebrated their deep connection to nature.

However, the arrival of European colonists in the 15th century brought significant challenges to the Native American way of life. Forced removal from ancestral lands, disease, and conflict resulted in the tragic loss of millions of lives and the disruption of their cultures.

Despite enduring centuries of adversity and systemic oppression, Native Americans have shown remarkable resilience and continue to preserve their heritage and traditions. Efforts to reclaim ancestral lands, revitalize languages, and promote cultural awareness are integral to their ongoing story.

Today, Native Americans contribute to the diverse tapestry of American society while advocating for their rights, recognition, and the protection of their unique cultural identities. Acknowledging and respecting the histories and contributions of Native Americans are vital steps toward fostering understanding and appreciation for their enduring legacy.

SubQuestion No : 5

Q.5 What is the central theme of the passage?

- Ans
- ☐ 1. The Impact of European Colonization on Native Americans
 - ☐ 2. The Loss of Native American Lives due to Disease and Conflict
 - ☐ 3. Native American Traditions and Cultural Expressions
 - ☒ 4. The Ongoing Struggle for Native American Rights and Recognition

Question ID : 630680385758

Option 1 ID : 6306801503751

Option 2 ID : 6306801503753

Option 3 ID : 6306801503750

Option 4 ID : 6306801503752

Status : Answered

Chosen Option : 4



Comprehension:

Read the passage carefully and choose the best answer to each question out of the four alternatives.

The history of Native Americans is one of rich cultural diversity and resilience, dating back thousands of years before the arrival of European settlers. The indigenous peoples of North America inhabited a vast range of territories, each with unique traditions, languages, and belief systems.

For countless generations, Native Americans lived in harmony with the land, relying on hunting, fishing, and agriculture for sustenance. They developed intricate social structures and artistic expressions that celebrated their deep connection to nature.

However, the arrival of European colonists in the 15th century brought significant challenges to the Native American way of life. Forced removal from ancestral lands, disease, and conflict resulted in the tragic loss of millions of lives and the disruption of their cultures.

Despite enduring centuries of adversity and systemic oppression, Native Americans have shown remarkable resilience and continue to preserve their heritage and traditions. Efforts to reclaim ancestral lands, revitalize languages, and promote cultural awareness are integral to their ongoing story.

Today, Native Americans contribute to the diverse tapestry of American society while advocating for their rights, recognition, and the protection of their unique cultural identities. Acknowledging and respecting the histories and contributions of Native Americans are vital steps toward fostering understanding and appreciation for their enduring legacy.

SubQuestion No : 6

Q.6 Which statement connects facts from the passage to the world?

- Ans**
- ☒ 1. The arrival of European colonists led to the eradication of Native American cultures.
 - ☒ 2. Native Americans relied on agriculture for sustenance and survival.
 - ☒ 3. Native Americans contribute to the diverse tapestry of American society today.
 - ☒ 4. The preservation of Native American languages has not been a priority in recent times.

Question ID : **630680385759**

Option 1 ID : **6306801503755**

Option 2 ID : **6306801503754**

Option 3 ID : **6306801503756**

Option 4 ID : **6306801503757**

Status : **Answered**

Chosen Option : **1**



Comprehension:

Read the passage carefully and choose the best answer to each question out of the four alternatives.

The history of Native Americans is one of rich cultural diversity and resilience, dating back thousands of years before the arrival of European settlers. The indigenous peoples of North America inhabited a vast range of territories, each with unique traditions, languages, and belief systems.

For countless generations, Native Americans lived in harmony with the land, relying on hunting, fishing, and agriculture for sustenance. They developed intricate social structures and artistic expressions that celebrated their deep connection to nature.

However, the arrival of European colonists in the 15th century brought significant challenges to the Native American way of life. Forced removal from ancestral lands, disease, and conflict resulted in the tragic loss of millions of lives and the disruption of their cultures.

Despite enduring centuries of adversity and systemic oppression, Native Americans have shown remarkable resilience and continue to preserve their heritage and traditions. Efforts to reclaim ancestral lands, revitalize languages, and promote cultural awareness are integral to their ongoing story.

Today, Native Americans contribute to the diverse tapestry of American society while advocating for their rights, recognition, and the protection of their unique cultural identities. Acknowledging and respecting the histories and contributions of Native Americans are vital steps toward fostering understanding and appreciation for their enduring legacy.

SubQuestion No : 7

Q.7 Which title best represents the passage?

- Ans ☒ 1. Native American Traditions and Cultures
- ☒ 2. The Resilience of Native Americans Throughout History
- ☒ 3. European Colonization and Its Impact on Native Americans
- ☒ 4. The Struggle for Recognition: Native American Rights Today

Question ID : 630680385757

Option 1 ID : 6306801503746

Option 2 ID : 6306801503747

Option 3 ID : 6306801503748

Option 4 ID : 6306801503749

Status : Not Answered

Chosen Option : --

Q.8 Sentences of a paragraph are given below in jumbled order. Arrange the sentences in the correct order to form a meaningful and coherent paragraph.

A. Both landowners and landless labourers have an important role to play and they are interdependent for the fulfilment of their needs.

B. Agriculture is the main occupation of the Changs.

C. The landowners need the services of the landless labourers for the cultivation of their fields, and the labourers are paid for their labour in cash or kind.

D. The majority of the people depend on it for their livelihood.

- Ans ☒ 1. BDAC
- ☒ 2. DCBA
- ☒ 3. ABCD
- ☒ 4. CDAB

Question ID : 630680403661

Option 1 ID : 6306801574137

Option 2 ID : 6306801574136

Option 3 ID : 6306801574134

Option 4 ID : 6306801574135

Status : Answered

Chosen Option : 1

Q.9 Sentences of a paragraph are given below in jumbled order. Arrange the sentences in the correct order to form a meaningful and coherent paragraph.

- A. Nobody at the school would come over and talk to him.
- B. And if he tried to talk to them, they were very standoffish.
- C. The other boys were not actively ignoring him, but they were certainly keeping their distance.
- D. Yoto could feel that the tide had turned against him in a matter of a few days.

Ans ☒ 1. DCAB
☒ 2. DBAC
☒ 3. BCDA
☒ 4. CDBA

Question ID : 630680403663
Option 1 ID : 6306801574143
Option 2 ID : 6306801574142
Option 3 ID : 6306801574145
Option 4 ID : 6306801574144
Status : Answered
Chosen Option : 1

Q.10 Select the option that can be used as a one-word substitute for the given group of words.

Happening in five years

Ans ☒ 1. Quinquennial
☒ 2. Decennial
☒ 3. Triennial
☒ 4. Quadrennial

Question ID : 630680403673
Option 1 ID : 6306801574183
Option 2 ID : 6306801574185
Option 3 ID : 6306801574184
Option 4 ID : 6306801574182
Status : Answered
Chosen Option : 1

Q.11 Fill in the blank with the appropriate verb in the present perfect tense:
The archaeologists _____ many ancient artifacts in the remote cave.

Ans ☒ 1. were discovering
☒ 2. have discovered
☒ 3. will discover
☒ 4. discovered

Question ID : 630680385451
Option 1 ID : 6306801502620
Option 2 ID : 6306801502618
Option 3 ID : 6306801502621
Option 4 ID : 6306801502619
Status : Answered
Chosen Option : 2

Q.12 Select the option to fill in the missing sentence that fits into the context of the passage.

- A. The seer led Namu inside the house to a great kitchen.
- B. _____.
- C. Two women served them food as soon as they sat down at the long table.
- D. The aroma of meat cooked with country ginger and dried red chillies wafted upward.

Ans ☒ 1. They came to thank the seer saying they had not eaten so well in the past two months.
☒ 2. The act multiplied their grain in their granaries, and the more they gave away, the more was added to them.
☒ 3. There were about four fire-places where pots of meat and rice were cooking.
☒ 4. The cook had prepared only green vegetables and a pungent curry that day to everyone's dismay.

Question ID : 630680403660
Option 1 ID : 6306801574132
Option 2 ID : 6306801574130
Option 3 ID : 6306801574131
Option 4 ID : 6306801574133
Status : Answered
Chosen Option : 3

Q.13 Select the most appropriate option to fill in the blank.

I was furious since I _____ in the bargain that my uncle made with my father. He had already cheated us once.

Ans ☒ 1. smelt a rat
☒ 2. shed crocodile tears
☒ 3. am a dark horse
☒ 4. was horsing around

Question ID : 630680403676
Option 1 ID : 6306801574197
Option 2 ID : 6306801574195
Option 3 ID : 6306801574196
Option 4 ID : 6306801574194
Status : Answered
Chosen Option : 1

Q.14 Select the word segment that substitutes the bracketed segment correctly and completes the sentence meaningfully.
The professor's lecture on quantum physics was fascinating; she [simplified complex concepts], making it easier for the students to grasp the subject.

Ans ☒ 1. further complicated technical terms
☒ 2. confused students with jargon
☒ 3. made complex concepts understandable
☒ 4. elaborated on obscure ideas

Question ID : 630680385727
Option 1 ID : 6306801503638
Option 2 ID : 6306801503640
Option 3 ID : 6306801503641
Option 4 ID : 6306801503639
Status : Answered
Chosen Option : 3

Q.15 Select the most appropriate ANTONYM of the underlined word.

Mary is looking haggard off late.

- Ans ☒ 1. Emaciated
☒ 2. Exhausted
☒ 3. Depleted
☒ 4. Exuberant

Question ID : 630680403681
Option 1 ID : 6306801574216
Option 2 ID : 6306801574215
Option 3 ID : 6306801574217
Option 4 ID : 6306801574214
Status : Answered
Chosen Option : 4

Q.16 Select the most appropriate option that can substitute the underlined segment in the given sentence.

Lady Macbeth was a person who walked in sleep.

- Ans ☒ 1. ventriloquist
☒ 2. numismatist
☒ 3. somniloquist
☒ 4. somnambulist

Question ID : 630680403668
Option 1 ID : 6306801574163
Option 2 ID : 6306801574165
Option 3 ID : 6306801574162
Option 4 ID : 6306801574164
Status : Answered
Chosen Option : 4

Q.17 Fill in the blank with the most appropriate option.
They weren't invited for the retreat, _____ they?

- Ans ☒ 1. can
☒ 2. are
☒ 3. were
☒ 4. have

Question ID : 630680385580
Option 1 ID : 6306801503100
Option 2 ID : 6306801503101
Option 3 ID : 6306801503099
Option 4 ID : 6306801503098
Status : Answered
Chosen Option : 3

Q.18 Select the most appropriate synonym of the given word.

Ostensible

- Ans ☒ 1. Obscure
☒ 2. Plausible
☒ 3. Vague
☒ 4. Concealed

Question ID : 630680403683

Option 1 ID : 6306801574223

Option 2 ID : 6306801574222

Option 3 ID : 6306801574225

Option 4 ID : 6306801574224

Status : Not Attempted and
Marked For Review

Chosen Option : --

Q.19 Select the word from the options which is the same in meaning to the bracketed word given in the sentence below.

He had known poor Sayers-a most distinguished soldier, but brave to (rashness).

- Ans ☒ 1. hastiness
☒ 2. horrible
☒ 3. craggy
☒ 4. elaborate

Question ID : 630680385657

Option 1 ID : 6306801503386

Option 2 ID : 6306801503387

Option 3 ID : 6306801503388

Option 4 ID : 6306801503389

Status : Answered

Chosen Option : 3

Q.20 Select the most appropriate option that can substitute the underlined segment in the given sentence.

My aunt is one who sneers at the beliefs of others.

- Ans ☒ 1. commentator
☒ 2. arbitrator
☒ 3. critic
☒ 4. cynic

Question ID : 630680403666

Option 1 ID : 6306801574156

Option 2 ID : 6306801574157

Option 3 ID : 6306801574155

Option 4 ID : 6306801574154

Status : Answered

Chosen Option : 3

Q.21 Select the option that can be used as a one-word substitute for the given group of words.

Fit to drink

- Ans** ☒ 1. Panacea
 ☒ 2. Edible
 ☒ 3. Portable
 ☒ 4. Potable

Question ID : 630680403674
Option 1 ID : 6306801574188
Option 2 ID : 6306801574189
Option 3 ID : 6306801574186
Option 4 ID : 6306801574187
Status : Answered
Chosen Option : 4

Comprehension:

In the following passage some words have been deleted. Fill in the blanks with the help of the alternatives given. Select the most appropriate option for each number.

Shivang stopped and let Suri go (1) _____. When Suri put his foot on the bottom step, the step (2) _____. He stood still, then tried his weight (3) _____ degrees. The step was silent.

SubQuestion No : 22

Q.22 Select the most appropriate option to fill in the blank No. 3.

- Ans** ☒ 1. along
 ☒ 2. by
 ☒ 3. of
 ☒ 4. off

Question ID : 630680385615
Option 1 ID : 6306801503225
Option 2 ID : 6306801503222
Option 3 ID : 6306801503224
Option 4 ID : 6306801503223
Status : Answered
Chosen Option : 2



Comprehension:

In the following passage some words have been deleted. Fill in the blanks with the help of the alternatives given. Select the most appropriate option for each number.

Shivang stopped and let Suri go (1) _____. When Suri put his foot on the bottom step, the step (2) _____. He stood still, then tried his weight (3) _____ degrees. The step was silent.

SubQuestion No : 23

Q.23 Select the most appropriate option to fill in the blank No. 1.

- Ans ☒ 1. front
☒ 2. ahead
☒ 3. upfront
☒ 4. forward

Question ID : 630680385613
Option 1 ID : 6306801503214
Option 2 ID : 6306801503215
Option 3 ID : 6306801503216
Option 4 ID : 6306801503217
Status : Answered
Chosen Option : 4

Comprehension:

In the following passage some words have been deleted. Fill in the blanks with the help of the alternatives given. Select the most appropriate option for each number.

Shivang stopped and let Suri go (1) _____. When Suri put his foot on the bottom step, the step (2) _____. He stood still, then tried his weight (3) _____ degrees. The step was silent.

SubQuestion No : 24

Q.24 Select the most appropriate option to fill in the blank No. 2.

- Ans ☒ 1. screamed
☒ 2. squeaked
☒ 3. rose
☒ 4. pinched

Question ID : 630680385614
Option 1 ID : 6306801503218
Option 2 ID : 6306801503220
Option 3 ID : 6306801503221
Option 4 ID : 6306801503219
Status : Answered
Chosen Option : 2

Q.25 Select the most appropriate option to fill in the blank.

All the answers to the worksheet are _____.

Ans ☒ 1. at his fingertips

☐ 2. at loggerheads

☐ 3. at his wit's end

☐ 4. at a loose end

Question ID : 630680403935

Option 1 ID : 6306801575227

Option 2 ID : 6306801575229

Option 3 ID : 6306801575226

Option 4 ID : 6306801575228

Status : Answered

Chosen Option : 1



Teachingninja.in