



# Teachingninja.in



**Latest Govt Job updates**



**Private Job updates**



**Free Mock tests available**



**Visit - [teachingninja.in](https://teachingninja.in)**

# DDA ASO

**Previous Year Paper**  
**08 Oct, 2023 Shift 4**





**DELHI DEVELOPMENT AUTHORITY**  
**RECRUITMENT CELL**  
**VIKAS SADAN, INA, NEW DELHI - 110023**  
(<https://www.dda.gov.in>)

Advertisement No. 02/2023/Recrt. Cell/Pers./DDA

Test Date	08/10/2023
Test Time	5:30 PM - 6:30 PM
Subject	Assistant Section Officer (ASO)

Section : General Intelligence and Reasoning

**Q.1** If the first half of the above arrangement is written in reverse order followed by second half written in reverse order, then which letter or number or symbol is 6<sup>th</sup> to the left of the letter or number or symbol which is 13<sup>th</sup> from left?

Direction:

(LEFT) A 4 B G 9 % 5 D S G 8 H & U 9 8 C @ A 9 & G H 8 C 2 F & 8 T S 4 G 7 % Z (RIGHT)

- Ans
- ☒ 1. %
- ☒ 2. H
- ☒ 3. 5
- ☒ 4. S

Question ID : 630680403820  
Option 1 ID : 6306801574766  
Option 2 ID : 6306801574767  
Option 3 ID : 6306801574768  
Option 4 ID : 6306801574769  
Status : Not Answered

Chosen Option : --

**Q.2** Read the given statements and conclusions carefully. Assuming that the information given in the statements is true, even if it appears to be at variance with commonly known facts, decide which of the given conclusions logically follow(s) from the statements.

Statement:

Students nowadays think too much about the future which results in more and more depression.

Conclusions:

- I. Life is not permanent so better to live in the present.  
II. Overthinking sometimes spoils the present as well as the future.

- Ans
- ☒ 1. Only conclusion I follows.
- ☒ 2. Neither conclusion I nor II follows.
- ☒ 3. Only conclusion II follows.
- ☒ 4. Either conclusion I or II follows.

Question ID : 630680403831  
Option 1 ID : 6306801574810  
Option 2 ID : 6306801574813  
Option 3 ID : 6306801574811  
Option 4 ID : 6306801574812  
Status : Answered

Chosen Option : 3

Q.3 Which letter or number is 6<sup>th</sup> to the right of the letter or number which is 13<sup>th</sup> from the left?

Direction:

(LEFT) A 4 C 7 E 9 G 6 I 2 K 1 M 3 O 5 Q 8 S 4 U 5 W 6 Y 9 G 8 I 2 U 6 D 1 G 9 (RIGHT)

- Ans
- ✓ 1. S
  - ✗ 2. U
  - ✗ 3. 8
  - ✗ 4. 4

Question ID : 630680403819  
Option 1 ID : 6306801574765  
Option 2 ID : 6306801574762  
Option 3 ID : 6306801574764  
Option 4 ID : 6306801574763  
Status : Not Answered  
Chosen Option : --

Q.4 How many such letters are there in the above arrangement, each of which is immediately preceded by a symbol and immediately followed by a number?

Direction:

(LEFT) A 4 B G 9 % 5 D S G 8 H & U 9 S C @ A 9 & G H 8 C % 2 A # 9 B @ H 7 % Z (RIGHT)

- Ans
- ✓ 1. Four
  - ✗ 2. Two
  - ✗ 3. Three
  - ✗ 4. Five

Question ID : 630680403818  
Option 1 ID : 6306801574760  
Option 2 ID : 6306801574758  
Option 3 ID : 6306801574759  
Option 4 ID : 6306801574761  
Status : Answered  
Chosen Option : 1

Q.5 If the first half of the above arrangement is written in reverse order and there is no change in the position of the second half, then which letter or number or symbol is 14<sup>th</sup> to the right of the letter or number or symbol which is 34<sup>th</sup> from the right?

Direction:

(LEFT) Y 4 Z 9 T % 5 W S G 8 S & F 9 C 8 @ Z 9 & S 8 \* C 2 U & 8 G S 4 T 7 % A (RIGHT)

- Ans
- ✗ 1. Y
  - ✗ 2. Z
  - ✓ 3. 4
  - ✗ 4. %

Question ID : 630680403824  
Option 1 ID : 6306801574782  
Option 2 ID : 6306801574785  
Option 3 ID : 6306801574783  
Option 4 ID : 6306801574784  
Status : Not Answered  
Chosen Option : --

**Q.6** Read the given statements and conclusions carefully. Assuming that the information given in the statements is true, even if it appears to be at variance with commonly known facts, decide which of the given conclusions logically follow(s) from the statements.

Statements:

- A. No pens are pencils.
- B. Some pens are erasers.
- C. Some erasers are pencil.

Conclusions:

- I. Some erasers are pens
- II. All pencils are erasers.
- III. No pencils are pens

- Ans**
- ☒ 1. All conclusions follow.
  - ☒ 2. Both conclusions I and III follow.
  - ☒ 3. Both conclusions I and II follow.
  - ☒ 4. Both conclusions II and III follow.

Question ID : 630680403841

Option 1 ID : 6306801574853

Option 2 ID : 6306801574851

Option 3 ID : 6306801574850

Option 4 ID : 6306801574852

Status : Answered

Chosen Option : 2

**Q.7** Select the letter-cluster from among the given options that can replace the question mark (?) in the following series.

QG, TL, WQ, ZV, ?

- Ans**
- ☒ 1. BD
  - ☒ 2. BA
  - ☒ 3. CD
  - ☒ 4. CA

Question ID : 630680403839

Option 1 ID : 6306801574845

Option 2 ID : 6306801574842

Option 3 ID : 6306801574844

Option 4 ID : 6306801574843

Status : Answered

Chosen Option : 4

**Q.8** Pointing to Garima, Naman says, 'I am the son of the only daughter of her mother'. How is Naman related to Garima?

- Ans**
- ☒ 1. Brother
  - ☒ 2. Father
  - ☒ 3. Son
  - ☒ 4. Cousin

Question ID : 630680403827

Option 1 ID : 6306801574795

Option 2 ID : 6306801574796

Option 3 ID : 6306801574794

Option 4 ID : 6306801574797

Status : Answered

Chosen Option : 3

**Q.9** Read the given statements and conclusions carefully. Assuming that the information given in the statements is true, even if it appears to be at variance with commonly known facts, decide which of the given conclusions logically follow(s) from the statements.

Statements:

- A. Some hens are deer.
- B. Some deer are bears.
- C. Some hens are crocodiles.

Conclusions:

- I. All deer are crocodiles.
- II. All crocodiles are hens.
- III. All hens are bears.

- Ans**
- ☒ 1. Both conclusions II and III follow.
  - ☒ 2. None of the conclusions follow.
  - ☒ 3. Both conclusions I and III follow.
  - ☒ 4. Both conclusions I and II follow.

Question ID : 630680403842  
Option 1 ID : 6306801574856  
Option 2 ID : 6306801574857  
Option 3 ID : 6306801574855  
Option 4 ID : 6306801574854  
Status : Answered  
Chosen Option : 2

**Q.10** In a certain code language, 'LOST' is written as 'WVRO' and 'FIND' is written as 'GQLI'. How will 'REST' be written in that language?

- Ans**
- ☒ 1. WUVH
  - ☒ 2. VWHU
  - ☒ 3. WVHU
  - ☒ 4. WVUH

Question ID : 630680403830  
Option 1 ID : 6306801574806  
Option 2 ID : 6306801574809  
Option 3 ID : 6306801574808  
Option 4 ID : 6306801574807  
Status : Answered  
Chosen Option : 3

**Q.11** Coaching XYZ scheduled classes on Computer, Reasoning, General Studies, Mathematics, Biology, Chemistry and Physics on different days of the week starting from Sunday to Saturday but not necessarily in the same order as per the following:

- There are exactly four subject classes scheduled before the day of class for Computer.
- Biology class is scheduled on the adjacent day of Chemistry and Mathematics class.
- Reasoning class is scheduled after the day of Computer and before the day of the General Study class.
- Physics class is scheduled on Sunday but not adjacent to the day of Mathematics class.

On which day of the week is the Mathematics class scheduled in Coaching XYZ?

- Ans**
- ☒ 1. Thursday
  - ☒ 2. Monday
  - ☒ 3. Wednesday
  - ☒ 4. Tuesday

Question ID : 630680403837  
Option 1 ID : 6306801574837  
Option 2 ID : 6306801574834  
Option 3 ID : 6306801574836  
Option 4 ID : 6306801574835  
Status : Not Answered  
Chosen Option : --

**Q.12** Select the option that is related to the third term in the same way as the second term is related to the first letter-cluster.

SOCIAL : UQEJBM :: POLICY : ?

- Ans
- ☒ 1. RQNJEZ
  - ☒ 2. RQNJDZ
  - ☒ 3. RQOJDZ
  - ☒ 4. RQMJDZ

Question ID : 630680403832  
Option 1 ID : 6306801574814  
Option 2 ID : 6306801574815  
Option 3 ID : 6306801574817  
Option 4 ID : 6306801574816  
Status : Answered  
Chosen Option : 2

**Q.13** Select the number from among the given options that can replace the question mark (?) in the following series.

12, 13, 28, 87, ?

- Ans
- ☒ 1. 360
  - ☒ 2. 352
  - ☒ 3. 348
  - ☒ 4. 356

Question ID : 630680403834  
Option 1 ID : 6306801574822  
Option 2 ID : 6306801574824  
Option 3 ID : 6306801574825  
Option 4 ID : 6306801574823  
Status : Answered  
Chosen Option : 2

**Q.14** Select the term from among the given options that can replace the question mark (?) in the following series.

DMI, IP27, NS125, SV343, ?

- Ans
- ☒ 1. YY739
  - ☒ 2. XZ729
  - ☒ 3. XY729
  - ☒ 4. XY829

Question ID : 630680403840  
Option 1 ID : 6306801574849  
Option 2 ID : 6306801574848  
Option 3 ID : 6306801574846  
Option 4 ID : 6306801574847  
Status : Answered  
Chosen Option : 3

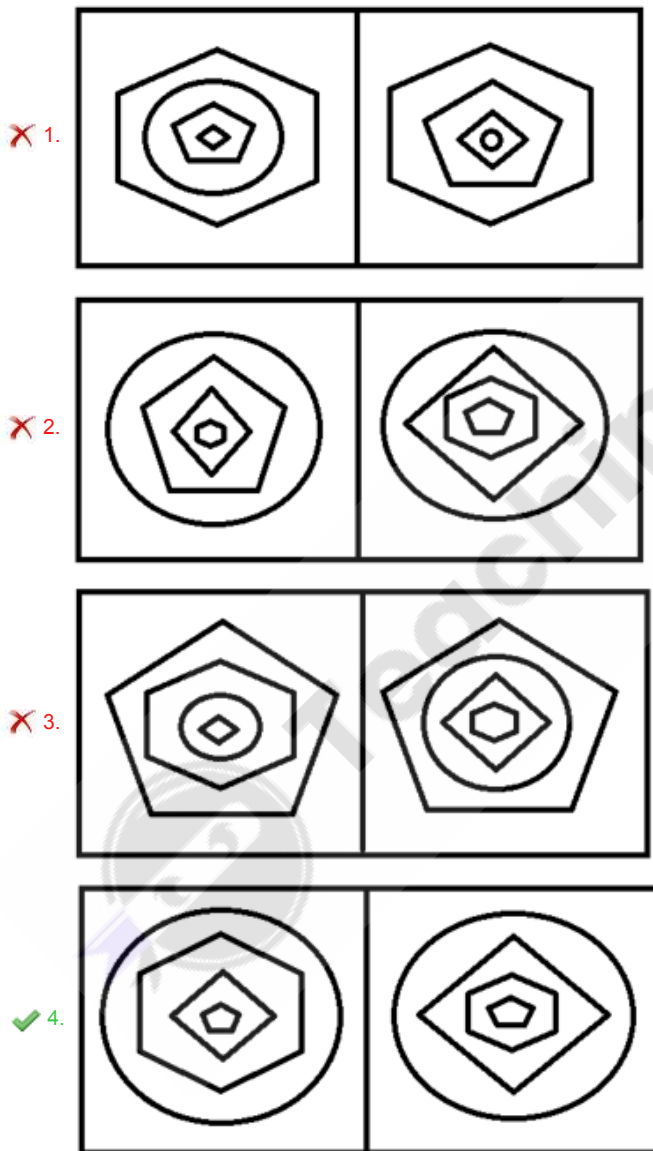
Q.15 Four pairs have been given, out of which three are alike in some manner and one is different. Select the one that is different.

- Ans ☒ 1. FAIL : 28  
☒ 2. EXIT: 56  
☒ 3. TRAP : 55  
☒ 4. QUIT : 67

Question ID : 630680403835  
Option 1 ID : 6306801574826  
Option 2 ID : 6306801574827  
Option 3 ID : 6306801574829  
Option 4 ID : 6306801574828  
Status : Answered  
Chosen Option : 2

Q.16 Four figure-pairs have been given, out of which three are alike in some manner and one is different. Select the one that is different.

Ans



Question ID : 630680403845  
Option 1 ID : 6306801574866  
Option 2 ID : 6306801574868  
Option 3 ID : 6306801574867  
Option 4 ID : 6306801574869  
Status : Answered  
Chosen Option : 4



**Q.17** Eight representatives of different countries Pakistan, Bangladesh, India, Australia, England, Brazil, France and Germany are sitting on a round table facing towards the centre, keeping equal distance between the neighbours but not necessarily in the same order as per the following:

1. Indian representative is sitting adjacent to Australian and German representatives.
2. Bangladesh representative is sitting opposite to German representative.
3. Indian representative is sitting third to the right of the Bangladesh representative.
4. French representative is sitting adjacent to German and Brazilian representatives.
5. India and Pakistan representative is not sitting opposite to each other.

Who among the following is sitting opposite to French representative?

- Ans**
- ☒ 1. India
  - ☒ 2. Bangladesh
  - ☒ 3. Australia
  - ☒ 4. Pakistan

Question ID : 630680403838

Option 1 ID : 6306801574840

Option 2 ID : 6306801574838

Option 3 ID : 6306801574839

Option 4 ID : 6306801574841

Status : Not Answered

Chosen Option : --

**Q.18** How many such letters are there in the above arrangement, each of which is immediately preceded by a symbol and immediately followed by a number?

Direction:

(LEFT) 3 A 6 H & X 5 @ H 8 & V 9 \* C @ B 9 & G 8 D % 3 A # 9 E @ H 8 % Y 9 @ (RIGHT)

- Ans**
- ☒ 1. Five
  - ☒ 2. More than Six
  - ☒ 3. Four
  - ☒ 4. Six

Question ID : 630680403821

Option 1 ID : 6306801574771

Option 2 ID : 6306801574773

Option 3 ID : 6306801574770

Option 4 ID : 6306801574772

Status : Answered

Chosen Option : 2

**Q.19** Four letter-cluster pairs have been given, out of which three are alike in some manner and one is different. Select the one that is different.

- Ans**
- ☒ 1. FRIENDSHIP : HTKGPRKJUF
  - ☒ 2. DARINGNESS : FCTKPQQCLE
  - ☒ 3. EVERYTHING : GXGTAELGFR
  - ☒ 4. ICEBREAKER : KEGDTPCIYC

Question ID : 630680403836

Option 1 ID : 6306801574830

Option 2 ID : 6306801574833

Option 3 ID : 6306801574831

Option 4 ID : 6306801574832

Status : Not Answered

Chosen Option : --

Q.20 Find wrong number in the series:

149, 174, 300, 924, 4049

- Ans ☒ 1. 300  
☒ 2. 4049  
☒ 3. 924  
☒ 4. 174

Question ID : 630680384603  
Option 1 ID : 6306801499299  
Option 2 ID : 6306801499300  
Option 3 ID : 6306801499298  
Option 4 ID : 6306801499301  
Status : Answered  
Chosen Option : 1

Q.21 Select the option that is related to the third term in the same way as the second term is related to the first term.

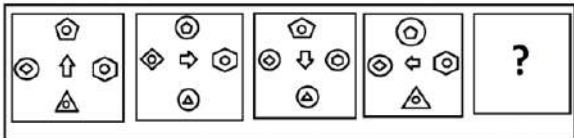
CRISIS : XIRHRH :: STABLE : ?

- Ans ☒ 1. HGZYMV  
☒ 2. HGZYOF  
☒ 3. HGZYOV  
☒ 4. HHZYOV

Question ID : 630680403833  
Option 1 ID : 6306801574819  
Option 2 ID : 6306801574821  
Option 3 ID : 6306801574818  
Option 4 ID : 6306801574820  
Status : Answered  
Chosen Option : 3



Q.22 Select the figure from among the given options that can replace the question mark (?) in the following series.



Ans

- ✗ 1.
- ✗ 2.
- ✓ 3.
- ✗ 4.

Question ID : 630680403846

Option 1 ID : 6306801574873

Option 2 ID : 6306801574871

Option 3 ID : 6306801574870

Option 4 ID : 6306801574872

Status : Not Answered

Chosen Option : --

Q.23 In a certain code language, 'RACE' is written as 'VDEF' and 'LIFE' is written as 'PLHF'. How will 'VIRU' be written in that language?

- Ans ✗ 1. ZMTV
- ✗ 2. YLTV
- ✗ 3. ZLUV
- ✓ 4. ZLTV

Question ID : 630680403829

Option 1 ID : 6306801574802

Option 2 ID : 6306801574805

Option 3 ID : 6306801574803

Option 4 ID : 6306801574804

Status : Answered

Chosen Option : 4

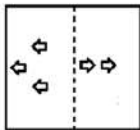
Q.24  $P + Q$  means 'P is the father of Q',  
 $P - Q$  means 'P is the mother of Q',  
 $P \times Q$  means 'P is the daughter of Q' and  
 $P \div Q$  means 'P is the son of Q'.  
If  $A \div B - C \times D + E$ , then how is A related to E?

- Ans ☒ 1. Father  
☒ 2. Brother  
☒ 3. Grandfather  
☒ 4. Son

Question ID : 630680403828  
Option 1 ID : 6306801574799  
Option 2 ID : 6306801574798  
Option 3 ID : 6306801574801  
Option 4 ID : 6306801574800  
Status : Answered  
Chosen Option : 2

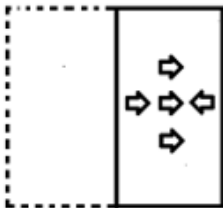


Q.25 Select the option that depicts how the given transparent sheet of paper would appear if it is folded at the dotted line.

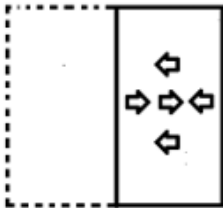


Ans

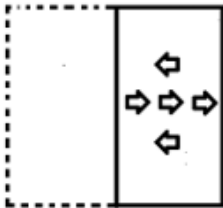
☒ 1.



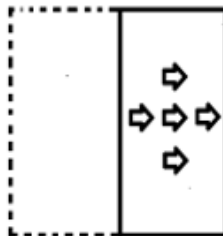
☒ 2.



☒ 3.



☒ 4.



Question ID : 630680403843

Option 1 ID : 6306801574860

Option 2 ID : 6306801574858

Option 3 ID : 6306801574859

Option 4 ID : 6306801574861

Status : Answered

Chosen Option : 4

Section : General Awareness

Q.1 What is the name of the first regional AI news anchor of India?

Ans ☒ 1. Siri

☒ 2. Lyra

☒ 3. Lisa

☒ 4. Alexa

Question ID : 630680403793

Option 1 ID : 6306801574659

Option 2 ID : 6306801574658

Option 3 ID : 6306801574661

Option 4 ID : 6306801574660

Status : Answered

Chosen Option : 3

Q.2 Which state in India has the highest population according to Census 2011?

- Ans ☒ 1. Maharashtra  
☒ 2. Bihar  
☒ 3. Madhya Pradesh  
☒ 4. Uttar Pradesh

Question ID : 630680403811  
Option 1 ID : 6306801574730  
Option 2 ID : 6306801574732  
Option 3 ID : 6306801574731  
Option 4 ID : 6306801574733  
Status : Answered  
Chosen Option : 4

Q.3 The Telangana High Court made a noteworthy ruling striking down the Telangana Eunuch's Act of \_\_\_\_\_ on 6 July 2023.

- Ans ☒ 1. 1916  
☒ 2. 1919  
☒ 3. 1917  
☒ 4. 1918

Question ID : 630680403794  
Option 1 ID : 6306801574662  
Option 2 ID : 6306801574665  
Option 3 ID : 6306801574663  
Option 4 ID : 6306801574664  
Status : Not Answered  
Chosen Option : --

Q.4 What is the main purpose of the 'Joint Liability Group' model often used by microfinance institutions in India?

- Ans ☒ 1. Offering credit cards to urban residents  
☒ 2. Managing investment portfolios for wealthy clients  
☒ 3. Providing individual loans to high-income professionals  
☒ 4. Extending group loans to low-income individuals for collective responsibility and support

Question ID : 630680403804  
Option 1 ID : 6306801574703  
Option 2 ID : 6306801574704  
Option 3 ID : 6306801574702  
Option 4 ID : 6306801574705  
Status : Not Answered  
Chosen Option : --

Q.5 Which of the following sectors is considered a part of social infrastructure in the Indian economy?

- Ans ☒ 1. Communication  
☒ 2. Education  
☒ 3. Transportation  
☒ 4. Energy

Question ID : 630680403806  
Option 1 ID : 6306801574710  
Option 2 ID : 6306801574711  
Option 3 ID : 6306801574713  
Option 4 ID : 6306801574712  
Status : Answered  
Chosen Option : 2

Q.6 In which of the following years did the Champaran Movement take place?

- Ans ☒ 1. 1912  
☒ 2. 1917  
☒ 3. 1920  
☒ 4. 1915

Question ID : 630680403814  
Option 1 ID : 6306801574742  
Option 2 ID : 6306801574744  
Option 3 ID : 6306801574745  
Option 4 ID : 6306801574743  
Status : Answered  
Chosen Option : 2

Q.7 Who among the following has become the chairman of the Research Advisory Committee of the ICAR-Indian Institute of Oil Palm Research in July 2023?

- Ans ☒ 1. B Neerja Prabhakar  
☒ 2. TK Anuradha  
☒ 3. Ritu Karidhal  
☒ 4. Nandini Harinath

Question ID : 630680403792  
Option 1 ID : 6306801574655  
Option 2 ID : 6306801574657  
Option 3 ID : 6306801574656  
Option 4 ID : 6306801574654  
Status : Not Answered  
Chosen Option : --

Q.8 In which of the following years was the 'All-India Village Industries Association' launched by Mahatma Gandhi?

- Ans ☒ 1. 1934  
☒ 2. 1932  
☒ 3. 1928  
☒ 4. 1930

Question ID : 630680403816  
Option 1 ID : 6306801574753  
Option 2 ID : 6306801574752  
Option 3 ID : 6306801574750  
Option 4 ID : 6306801574751  
Status : Answered  
Chosen Option : 4

Q.9 Which of the following countries is known for its significant petroleum reserves and is one of the major oil producers amid India's neighbouring countries?

- Ans
- ☒ 1. Bangladesh
  - ☒ 2. Myanmar
  - ☒ 3. Bhutan
  - ☒ 4. Nepal

Question ID : 630680403807  
Option 1 ID : 6306801574714  
Option 2 ID : 6306801574717  
Option 3 ID : 6306801574715  
Option 4 ID : 6306801574716  
Status : Answered  
Chosen Option : 2

Q.10 In India, the process of systematically collecting, recording and analysing demographic, economic and social data of its population is known as \_\_\_\_\_.

- Ans
- ☒ 1. Demographic Survey of India
  - ☒ 2. Population Census Initiative
  - ☒ 3. National Data Collection Scheme
  - ☒ 4. Census of India

Question ID : 630680403810  
Option 1 ID : 6306801574726  
Option 2 ID : 6306801574728  
Option 3 ID : 6306801574729  
Option 4 ID : 6306801574727  
Status : Answered  
Chosen Option : 4

Q.11 In economics, the term 'frictional unemployment' refers to \_\_\_\_\_.

- Ans
- ☒ 1. transitioning and new entrant unemployment
  - ☒ 2. technological obsolescence causing job loss
  - ☒ 3. skills-job mismatch during economic change
  - ☒ 4. unemployment during economic downturns

Question ID : 630680403803  
Option 1 ID : 6306801574699  
Option 2 ID : 6306801574701  
Option 3 ID : 6306801574698  
Option 4 ID : 6306801574700  
Status : Not Answered  
Chosen Option : --

Q.12 Which kingdom in Southern India was founded by Harihara and Bukka Raya?

- Ans
- ☒ 1. Chola Empire
  - ☒ 2. Rashtrakuta Empire
  - ☒ 3. Vijayanagara Empire
  - ☒ 4. Pandyan Empire

Question ID : 630680403813  
Option 1 ID : 6306801574738  
Option 2 ID : 6306801574741  
Option 3 ID : 6306801574739  
Option 4 ID : 6306801574740  
Status : Answered  
Chosen Option : 3



Q.13 Which of the following factors affects the climate of a place?

- Ans ☒ 1. Altitude  
☐ 2. Currency  
☐ 3. Population  
☐ 4. Longitude

Question ID : 630680403809  
Option 1 ID : 6306801574722  
Option 2 ID : 6306801574725  
Option 3 ID : 6306801574724  
Option 4 ID : 6306801574723  
Status : Answered  
Chosen Option : 1

Q.14 Which of the following initiatives focuses on promoting entrepreneurship and skill development in India?

- Ans ☐ 1. Swachh Bharat Abhiyan  
☒ 2. Make in India  
☐ 3. National Rural Employment Guarantee Act  
☐ 4. Pradhan Mantri Kisan Samman Nidhi

Question ID : 630680403805  
Option 1 ID : 6306801574706  
Option 2 ID : 6306801574709  
Option 3 ID : 6306801574708  
Option 4 ID : 6306801574707  
Status : Answered  
Chosen Option : 2

Q.15 Who authored the book 'Sachin @ 50-Celebrating a Maestro'?

- Ans ☐ 1. Bharat Sundaresan  
☐ 2. Sachin Tendulkar  
☐ 3. Maneesh Dutt  
☒ 4. Boria Majumdar

Question ID : 630680403796  
Option 1 ID : 6306801574672  
Option 2 ID : 6306801574671  
Option 3 ID : 6306801574673  
Option 4 ID : 6306801574670  
Status : Answered  
Chosen Option : 1

Q.16 Which dynasty ruled over medieval northern India?

- Ans ☐ 1. Pallavas  
☐ 2. Chalukyas  
☒ 3. Pratiharas  
☐ 4. Cholas

Question ID : 630680403812  
Option 1 ID : 6306801574736  
Option 2 ID : 6306801574735  
Option 3 ID : 6306801574737  
Option 4 ID : 6306801574734  
Status : Answered  
Chosen Option : 3

Q.17 Who among the following players won the orange cap in Indian Premier League 2023?

- Ans
- ☒ 1. Vijay Shankar
  - ☒ 2. Hardik Pandya
  - ☒ 3. Rashid Khan
  - ☒ 4. Shubman Gill

Question ID : 630680403797  
Option 1 ID : 6306801574675  
Option 2 ID : 6306801574674  
Option 3 ID : 6306801574676  
Option 4 ID : 6306801574677  
Status : Answered  
Chosen Option : 4

Q.18 Which of the following languages is recognised as a classical language of India?

- Ans
- ☒ 1. Gujarati
  - ☒ 2. Hindi
  - ☒ 3. Telugu
  - ☒ 4. Bengali

Question ID : 630680403802  
Option 1 ID : 6306801574696  
Option 2 ID : 6306801574694  
Option 3 ID : 6306801574697  
Option 4 ID : 6306801574695  
Status : Answered  
Chosen Option : 4

Q.19 Where was the Prarthana Samaj established in 1876?

- Ans
- ☒ 1. Calcutta
  - ☒ 2. Trivandrum
  - ☒ 3. Delhi
  - ☒ 4. Bombay

Question ID : 630680403815  
Option 1 ID : 6306801574746  
Option 2 ID : 6306801574748  
Option 3 ID : 6306801574749  
Option 4 ID : 6306801574747  
Status : Answered  
Chosen Option : 4

Q.20 Which Indian festival is known for its colourful display of powders and water, symbolising the victory of good over evil?

- Ans
- ☒ 1. Diwali
  - ☒ 2. Dussehra
  - ☒ 3. Holi
  - ☒ 4. Gudi Padwa

Question ID : 630680403800  
Option 1 ID : 6306801574686  
Option 2 ID : 6306801574688  
Option 3 ID : 6306801574687  
Option 4 ID : 6306801574689  
Status : Answered  
Chosen Option : 3

Q.21 Which of the following falls on 30th January to honour the memory of Mahatma Gandhi and his contributions to the Indian freedom struggle?

- Ans
- ☒ 1. Mahavir Jayanti
  - ☒ 2. Gandhi Jayanti
  - ☒ 3. Republic Day
  - ☒ 4. Martyr's Day

Question ID : 630680403801  
Option 1 ID : 6306801574690  
Option 2 ID : 6306801574691  
Option 3 ID : 6306801574692  
Option 4 ID : 6306801574693  
Status : Answered  
Chosen Option : 4

Q.22 Which portal has been developed by the National Commission for Protection of Child Rights for seamless monitoring of child care homes in August 2023?

- Ans
- ☒ 1. SAGE
  - ☒ 2. TAPAS
  - ☒ 3. MASI
  - ☒ 4. YUKTI

Question ID : 630680403795  
Option 1 ID : 6306801574669  
Option 2 ID : 6306801574667  
Option 3 ID : 6306801574666  
Option 4 ID : 6306801574668  
Status : Answered  
Chosen Option : 1

Q.23 Who among the following Indian authors received the Sahitya Akademi Award for the novel 'All The Lives We Never Lived' in 2022?

- Ans
- ☒ 1. Anuradha Roy
  - ☒ 2. Arundhati Roy
  - ☒ 3. Amitav Ghosh
  - ☒ 4. Vikram Seth

Question ID : 630680403799  
Option 1 ID : 6306801574685  
Option 2 ID : 6306801574684  
Option 3 ID : 6306801574682  
Option 4 ID : 6306801574683  
Status : Answered  
Chosen Option : 1

Q.24 Who among the following Indian authors penned the autobiography titled 'Wings of Fire'?

- Ans ☒ 1. APJ Abdul Kalam  
☒ 2. RK Narayan  
☒ 3. Shashi Tharoor  
☒ 4. Khushwant Singh

Question ID : 630680403798  
Option 1 ID : 6306801574680  
Option 2 ID : 6306801574679  
Option 3 ID : 6306801574681  
Option 4 ID : 6306801574678  
Status : Answered  
Chosen Option : 1

Q.25 Which of the following is the highest peak in the Western Ghats of India?

- Ans ☒ 1. Anamudi  
☒ 2. Kalsubai  
☒ 3. Doddabetta  
☒ 4. Kolaribetta

Question ID : 630680403808  
Option 1 ID : 6306801574719  
Option 2 ID : 6306801574720  
Option 3 ID : 6306801574718  
Option 4 ID : 6306801574721  
Status : Answered  
Chosen Option : 2

Section : Quantitative Aptitude

Q.1 If  $x$  is added to each of 33, 26, 9 and 6, then the numbers so obtained in this order, are in proportion. What is the mean proportional between  $(2x - 3)$  and  $(x + 3)$ ?

- Ans ☒ 1.  $6\sqrt{5}$   
☒ 2.  $6\sqrt{3}$   
☒ 3.  $5\sqrt{3}$   
☒ 4.  $3\sqrt{5}$

Question ID : 630680403877  
Option 1 ID : 6306801574995  
Option 2 ID : 6306801574997  
Option 3 ID : 6306801574996  
Option 4 ID : 6306801574994  
Status : Answered  
Chosen Option : 1

**Q.2** If the area of a circular field is  $3,850 \text{ m}^2$ , then the cost of fencing it at the rate of ₹56 per metre is:

- Ans**
- ☒ 1. ₹12,560
  - ☒ 2. ₹12,220
  - ☒ 3. ₹12,230
  - ☒ 4. ₹12,320

Question ID : 630680403867  
Option 1 ID : 6306801574956  
Option 2 ID : 6306801574957  
Option 3 ID : 6306801574955  
Option 4 ID : 6306801574954  
Status : Answered  
Chosen Option : 4

**Q.3** Two times the present age (in years) of Rani is equal to the age of Savithri (in years) after 9 years from now. After 19 years from now,  $\frac{2}{7}$  of Savithri's age (in years) will be equal to Rani's present age (in years). What will be Rani's age (in years) after 9 years from now?

- Ans**
- ☒ 1. 33
  - ☒ 2. 36
  - ☒ 3. 39
  - ☒ 4. 34

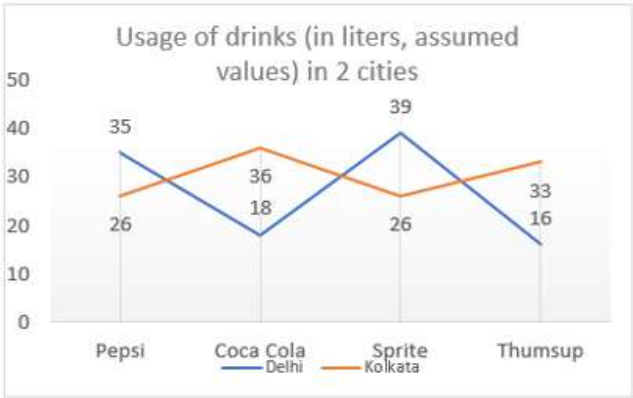
Question ID : 630680403848  
Option 1 ID : 6306801574879  
Option 2 ID : 6306801574878  
Option 3 ID : 6306801574880  
Option 4 ID : 6306801574881  
Status : Answered  
Chosen Option : 3

**Q.4** A has a total of 300 books. A has 20% more books than B and C has 30% fewer books than B. If C has read three-fifth of the books, then how many books were not read by C?

- Ans**
- ☒ 1. 120
  - ☒ 2. 70
  - ☒ 3. 90
  - ☒ 4. 105

Question ID : 630680403863  
Option 1 ID : 6306801574940  
Option 2 ID : 6306801574939  
Option 3 ID : 6306801574938  
Option 4 ID : 6306801574941  
Status : Answered  
Chosen Option : 2

Q.5 Study the given line graph and answer the question that follows.



What is the percentage increase of usage of sprite from Kolkata to Delhi?

- Ans
- ☒ 1. 50%
  - ☐ 2. 35%
  - ☐ 3. 25%
  - ☐ 4. 30%

Question ID : 630680403853  
Option 1 ID : 6306801574901  
Option 2 ID : 6306801574900  
Option 3 ID : 6306801574898  
Option 4 ID : 6306801574899  
Status : Answered  
Chosen Option : 1

Q.6 If  $2k + \frac{1}{k} = 4$ , then the value of  $k^3 + \frac{1}{8k^3}$  is:

- Ans
- ☐ 1. 3
  - ☒ 2. 5
  - ☐ 3. 8
  - ☐ 4. 4

Question ID : 630680403847  
Option 1 ID : 6306801574875  
Option 2 ID : 6306801574877  
Option 3 ID : 6306801574874  
Option 4 ID : 6306801574876  
Status : Answered  
Chosen Option : 2

**Q.7** In a room, there are some boys and some benches. If 5 boys sit on each bench, then 2 boys will have no bench to sit on. If 6 boys sit on each bench, then 2 benches remain unoccupied. What is the sum of the number of benches and the number of boys?

- Ans**
- ☒ 1. 85
  - ☒ 2. 84
  - ☒ 3. 83
  - ☒ 4. 86

Question ID : 630680403849

Option 1 ID : 6306801574884

Option 2 ID : 6306801574883

Option 3 ID : 6306801574882

Option 4 ID : 6306801574885

Status : Not Answered

Chosen Option : --

**Q.8** The area of a square is  $1444 \text{ m}^2$ , the breadth of a rectangle is  $\frac{1}{4}$  side of the square and the length of the rectangle is thrice its breadth. What is the difference between the area (in  $\text{m}^2$ ) of the square and the area of the rectangle?

- Ans**
- ☒ 1. 1173.25
  - ☒ 2. 1181.75
  - ☒ 3. 1180.75
  - ☒ 4. 270.25

Question ID : 630680403856

Option 1 ID : 6306801574910

Option 2 ID : 6306801574911

Option 3 ID : 6306801574913

Option 4 ID : 6306801574912

Status : Answered

Chosen Option : 1

**Q.9** Two pipes L and M can fill a cistern in 12 and 15 hours, respectively, and pipes N and O can empty the cistern in 18 and 24 hours, respectively. If pipes L, M and N are kept open for 3 hours and pipe N is closed and pipe O is opened for next 3 hours, then what part of the cistern is filled?

- Ans**
- ☒ 1.  $\frac{73}{120}$
  - ☒ 2.  $\frac{53}{60}$
  - ☒ 3.  $\frac{37}{90}$
  - ☒ 4.  $\frac{107}{150}$

Question ID : 630680403879

Option 1 ID : 6306801575004

Option 2 ID : 6306801575002

Option 3 ID : 6306801575003

Option 4 ID : 6306801575005

Status : Answered

Chosen Option : 2

**Q.10** When an article is sold at  $\frac{33}{40}$  of its actual selling price, there is a loss of 25%. If it is sold at 32% above its actual selling price, then the profit percentage is:

- Ans**
- ✓ 1. 20%
  - ✗ 2. 25%
  - ✗ 3. 30%
  - ✗ 4. 18%

Question ID : 630680403873  
 Option 1 ID : 6306801574979  
 Option 2 ID : 6306801574980  
 Option 3 ID : 6306801574981  
 Option 4 ID : 6306801574978  
 Status : Answered  
 Chosen Option : 1

**Q.11** The number of male employees and that of female employees in an organisation are 90 and 150, respectively. The average age of all the employees is 30. If the average age of all the female employees is 32% more than that of all the male employees, then what is the average age of all the female employees?

- Ans**
- ✗ 1. 32 years
  - ✗ 2. 38 years
  - ✓ 3. 33 years
  - ✗ 4. 28 years

Question ID : 630680403851  
 Option 1 ID : 6306801574890  
 Option 2 ID : 6306801574892  
 Option 3 ID : 6306801574893  
 Option 4 ID : 6306801574891  
 Status : Answered  
 Chosen Option : 3

**Q.12** A school has three job profiles i.e., Teacher, Account Manager, Receptionist. The given table shows their salaries, respectively, in different years.

Years	Teacher	Account Manager	Receptionist
2003	20,000	25,000	18,000
2004	30,000	27,000	20,000
2005	45,000	28,000	23,000
2006	50,000	40,000	35,000

The sum of the salaries of teacher in 2005 and 2006 is what percentage more than the sum of the salaries of the account manager in 2003 and salary of receptionist in 2006?

- Ans**
- ✗ 1.  $25\frac{1}{4}\%$
  - ✓ 2.  $58\frac{1}{3}\%$
  - ✗ 3.  $33\frac{1}{3}\%$
  - ✗ 4.  $80\frac{1}{3}\%$

Question ID : 630680403854  
 Option 1 ID : 6306801574903  
 Option 2 ID : 6306801574904  
 Option 3 ID : 6306801574902  
 Option 4 ID : 6306801574905  
 Status : Answered  
 Chosen Option : 2



Q.13 The value of  $25 + 5$  of  $\{12 + 3[5 - 2(7 - 4) + 3] - 6\} \div 3$  is:

Ans ☒ 1. 45

☐ 2. 40

☐ 3. 35

☐ 4. 25

Question ID : 630680403860

Option 1 ID : 6306801574928

Option 2 ID : 6306801574927

Option 3 ID : 6306801574926

Option 4 ID : 6306801574929

Status : Answered

Chosen Option : 1

Q.14 A and B entered into a partnership by investing capitals in the ratio  $\frac{2}{3} : \frac{11}{12}$ . A being an active partner got ₹2.5 lakhs out of the annual profit and remaining profit was divided between them in proportion to their investments. If A received a total of ₹5.7 lakhs as profit after one year, then what is the share (in ₹ lakhs) of B in the annual profit?

Ans ☒ 1. 8.8

☐ 2. 8.5

☐ 3. 7.8

☐ 4. 8.2

Question ID : 630680403875

Option 1 ID : 6306801574989

Option 2 ID : 6306801574988

Option 3 ID : 6306801574986

Option 4 ID : 6306801574987

Status : Not Answered

Chosen Option : --

Q.15 The number, 375 is increased by 48% and is decreased by x%. The net change in the number is 333. The value of x is:

Ans ☐ 1. 25

☐ 2. 20

☒ 3. 40

☐ 4. 30

Question ID : 630680403865

Option 1 ID : 6306801574946

Option 2 ID : 6306801574948

Option 3 ID : 6306801574949

Option 4 ID : 6306801574947

Status : Answered

Chosen Option : 3

**Q.16** In  $\triangle ABC$ , D is a point on side AC such that  $AB = AD$  and  $BD = DC$ . If  $\angle A = 104^\circ$ , then what is the complement of  $\angle DCB$ ?

- Ans**
- ☒ 1.  $79^\circ$
  - ☒ 2.  $67^\circ$
  - ☒ 3.  $71^\circ$
  - ☒ 4.  $76^\circ$

Question ID : **630680403871**  
Option 1 ID : **6306801574973**  
Option 2 ID : **6306801574970**  
Option 3 ID : **6306801574971**  
Option 4 ID : **6306801574972**  
Status : **Answered**  
Chosen Option : **3**

**Q.17** The average marks scored by Praveen in seven out of nine subjects in an exam is 80. If Praveen scored an average of 83 marks in all the nine subjects, then the average marks of Praveen in 8<sup>th</sup> and 9<sup>th</sup> subjects is how much more than the average marks of all the 9 subjects?

- Ans**
- ☒ 1. 10.5
  - ☒ 2. 12.5
  - ☒ 3. 11.5
  - ☒ 4. 13.5

Question ID : **630680403850**  
Option 1 ID : **6306801574888**  
Option 2 ID : **6306801574887**  
Option 3 ID : **6306801574886**  
Option 4 ID : **6306801574889**  
Status : **Answered**  
Chosen Option : **1**

**Q.18** A cone with base circumference 22 cm and slant height 5 cm is to be made out of paper. How much area (in  $\text{cm}^2$ ) of paper is needed to make 5 such cones?

- Ans**
- ☒ 1. 300
  - ☒ 2. 250
  - ☒ 3. 225
  - ☒ 4. 275

Question ID : **630680403857**  
Option 1 ID : **6306801574917**  
Option 2 ID : **6306801574915**  
Option 3 ID : **6306801574914**  
Option 4 ID : **6306801574916**  
Status : **Not Answered**  
Chosen Option : **--**

**Q.19** By selling an article at 4% profit instead of 10% loss, a man gains ₹560 more. What is the cost price of the article?

Ans ☒ 1. ₹3,800

☒ 2. ₹4,000

☒ 3. ₹3,200

☒ 4. ₹3,000

Question ID : 630680403872

Option 1 ID : 6306801574977

Option 2 ID : 6306801574976

Option 3 ID : 6306801574975

Option 4 ID : 6306801574974

Status : Answered

Chosen Option : 2

**Q.20** The diagonal of a cube is  $6\sqrt{3}$  ft. 1 kg of paint covers 12 square feet, how much will it cost to paint outside of a cube with if the cost of paint per kg is ₹320?

Ans ☒ 1. ₹5,760

☒ 2. ₹5,607

☒ 3. ₹5,706

☒ 4. ₹5,670

Question ID : 630680403859

Option 1 ID : 6306801574922

Option 2 ID : 6306801574925

Option 3 ID : 6306801574924

Option 4 ID : 6306801574923

Status : Not Answered

Chosen Option : --

**Q.21** If  $\sin A = \frac{5}{13}$ , then the value of  $\tan A + \sec A$  is:

Ans ☒ 1. 2

☒ 2. 2.5

☒ 3. 1

☒ 4. 1.5

Question ID : 630680403881

Option 1 ID : 6306801575012

Option 2 ID : 6306801575013

Option 3 ID : 6306801575010

Option 4 ID : 6306801575011

Status : Answered

Chosen Option : 4

**Q.22** Pipes A and B can fill a tank in 8 hours and 20 hours, respectively. Pipe C is an emptying pipe. If all the three pipes are opened together for 3 hours, then two-fifth part of the tank is filled up. Initially, A and B are opened for 4 hours and then both are closed, and pipe C is opened. In how much time (in hours) will C empty the tank?

**Ans** ☒ 1. 16.8

☐ 2. 15.4

☐ 3. 18

☐ 4. 16

Question ID : 630680403878

Option 1 ID : 6306801575000

Option 2 ID : 6306801574998

Option 3 ID : 6306801575001

Option 4 ID : 6306801574999

Status : Not Answered

Chosen Option : --

**Q.23** If the 9-digit number  $5x294385y$  is divisible by 72, then what is the value of  $\sqrt{6x - y}$  ?

**Ans** ☐ 1.  $4\sqrt{5}$

☒ 2.  $2\sqrt{3}$

☐ 3.  $3\sqrt{2}$

☐ 4.  $\sqrt{6}$

Question ID : 630680403861

Option 1 ID : 6306801574933

Option 2 ID : 6306801574931

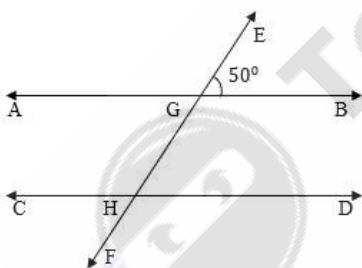
Option 3 ID : 6306801574930

Option 4 ID : 6306801574932

Status : Answered

Chosen Option : 2

**Q.24** In the given figure, AB and CD are parallel lines. If  $\angle EGB = 50^\circ$  then  $\angle CHG$  is:



**Ans** ☐ 1.  $125^\circ$

☒ 2.  $130^\circ$

☐ 3.  $150^\circ$

☐ 4.  $120^\circ$

Question ID : 630680403869

Option 1 ID : 6306801574964

Option 2 ID : 6306801574963

Option 3 ID : 6306801574965

Option 4 ID : 6306801574962

Status : Answered

Chosen Option : 2

**Q.25** If the volume of a cylinder, whose radius is 6 cm, is  $864\pi \text{ cm}^3$ , then the surface area (in  $\text{cm}^2$ ) of the cylinder is:

- Ans ☒ 1.  $376\pi$   
☒ 2.  $360\pi$   
☒ 3.  $367\pi$   
☒ 4.  $356\pi$

Question ID : 630680403858  
Option 1 ID : 6306801574919  
Option 2 ID : 6306801574921  
Option 3 ID : 6306801574918  
Option 4 ID : 6306801574920  
Status : Answered  
Chosen Option : 2

Section : English Comprehension

**Q.1** Select the option that can be used as a one-word substitute for the given group of words.

A funeral procession

- Ans ☒ 1. Cortège  
☒ 2. Convoy  
☒ 3. Caravan  
☒ 4. Congregation

Question ID : 630680403672  
Option 1 ID : 6306801574181  
Option 2 ID : 6306801574179  
Option 3 ID : 6306801574180  
Option 4 ID : 6306801574178  
Status : Answered  
Chosen Option : 1

**Q.2** Select the most appropriate option to fill in the blank.

He never \_\_\_\_\_ and so at last could overcome his problems. This shows his perseverance and determination.

- Ans ☒ 1. had a card up his sleeve  
☒ 2. threw up the sponge  
☒ 3. was a smart cookie  
☒ 4. brought home the bacon

Question ID : 630680403677  
Option 1 ID : 6306801574200  
Option 2 ID : 6306801574201  
Option 3 ID : 6306801574199  
Option 4 ID : 6306801574198  
Status : Answered  
Chosen Option : 2

Q.3 Select the most appropriate synonym of the underlined word.

He spoke to his enemies without rancour.

- Ans
- ☒ 1. Respect
  - ☒ 2. Benevolence
  - ☒ 3. Sympathy
  - ☒ 4. Spite

Question ID : 630680403684  
Option 1 ID : 6306801574228  
Option 2 ID : 6306801574226  
Option 3 ID : 6306801574229  
Option 4 ID : 6306801574227  
Status : Answered  
Chosen Option : 1

Q.4 Select the most appropriate option to fill in the blank.

The poor woman has to \_\_\_\_\_ of his misdeeds.

- Ans
- ☒ 1. bid defiance
  - ☒ 2. bear the brunt
  - ☒ 3. break the ice
  - ☒ 4. blow the trumpet

Question ID : 630680403675  
Option 1 ID : 6306801574191  
Option 2 ID : 6306801574190  
Option 3 ID : 6306801574193  
Option 4 ID : 6306801574192  
Status : Answered  
Chosen Option : 2

Q.5 Select the most appropriate option that can substitute the underlined segment in the given sentence.  
Mr. Verma is unable to pay his debts.

- Ans
- ☒ 1. bankrupt
  - ☒ 2. solvent
  - ☒ 3. shattered
  - ☒ 4. traumatised

Question ID : 630680403665  
Option 1 ID : 6306801574152  
Option 2 ID : 6306801574151  
Option 3 ID : 6306801574150  
Option 4 ID : 6306801574153  
Status : Answered  
Chosen Option : 1

Q.6 Select the most appropriate option to fill in the blank.

Somebody invited me, \_\_\_\_\_?

- Ans
- ☒ 1. doesn't they
  - ☐ 2. didn't they
  - ☐ 3. did they
  - ☐ 4. does they

Question ID : 630680403656  
Option 1 ID : 6306801574116  
Option 2 ID : 6306801574115  
Option 3 ID : 6306801574114  
Option 4 ID : 6306801574117  
Status : Answered  
Chosen Option : 2

Q.7 Select the most appropriate ANTONYM of the given word.

Brittle

- Ans
- ☐ 1. Understandable
  - ☐ 2. Undeliverable
  - ☐ 3. Unstoppable
  - ☒ 4. Unbreakable

Question ID : 630680403679  
Option 1 ID : 6306801574208  
Option 2 ID : 6306801574207  
Option 3 ID : 6306801574206  
Option 4 ID : 6306801574209  
Status : Answered  
Chosen Option : 4

Q.8 Select the most appropriate option that can substitute the underlined segment in the given sentence.

Shakespeare and Milton lived at the same time.

- Ans
- ☒ 1. (were) contemporaries
  - ☐ 2. (were) collaborators
  - ☐ 3. (were) arch-rivals
  - ☐ 4. (were) outlanders

Question ID : 630680403667  
Option 1 ID : 6306801574161  
Option 2 ID : 6306801574159  
Option 3 ID : 6306801574158  
Option 4 ID : 6306801574160  
Status : Answered  
Chosen Option : 1

Q.9 Select the option to fill in the missing sentence that fits into the context of the passage.

A. At the next festival season, Beshang the widower died.

B. \_\_\_\_\_.

C. The villagers said the storm had come to take him, because as soon as Beshang died, it left as suddenly as it had come.

D. At his funeral, he was given the honour due to the oldest member of the village.

Ans ☒ 1. He was known as a young man respectful to older people and regarded well among his peers, and admired by his age-group people.

☒ 2. He had been ailing for a long time, and one night when a great storm raged through the countryside, he breathed his last.

☒ 3. If anyone wanted to attend the funeral, they would be able to come on hearing the message.

☒ 4. For many people who had relatives or friends living in other villages, this was one way of communicating news of a death.

Question ID : 630680403657

Option 1 ID : 6306801574121

Option 2 ID : 6306801574118

Option 3 ID : 6306801574120

Option 4 ID : 6306801574119

Status : Answered

Chosen Option : 2

Q.10 Select the option that can be used as a one-word substitute for the given group of words.

Lasting for a very short time

Ans ☒ 1. Endemical

☒ 2. Latitudinal

☒ 3. Seasonal

☒ 4. Ephemeral

Question ID : 630680403670

Option 1 ID : 6306801574172

Option 2 ID : 6306801574171

Option 3 ID : 6306801574170

Option 4 ID : 6306801574173

Status : Answered

Chosen Option : 4



Q.11 Select the option to fill in the missing sentence that fits into the context of the passage.

A. \_\_\_\_\_.

B. Her teachers had asked her to pick different types of leaves, press them between heavy books and glue them to the pages of her scrap book.

C. She had collected around twenty different leaves.

D. Now she looked at each leaf and admired her handiwork.

- Ans ☒ 1. Moina was enjoying the stroll on the beach.
- ☒ 2. Moina brought her school bag out to the verandah.
- ☒ 3. Moina squinted at the mirror in front of her and tidied her hair.
- ☒ 4. Moina relished the curry and rice that her mother had made.

Question ID : 630680403659  
Option 1 ID : 6306801574126  
Option 2 ID : 6306801574129  
Option 3 ID : 6306801574127  
Option 4 ID : 6306801574128  
Status : Answered  
Chosen Option : 2

Q.12 Sentences of a paragraph are given below in jumbled order. Arrange the sentences in the correct order to form a meaningful and coherent paragraph.

A. Kaori didn't know what kind of job Fuyuki had gone for today.

B. When he met someone new, he usually ended up tongue-tied.

C. If it involved interacting with other people, things probably hadn't gone well.

D. He wasn't very articulate and he wasn't very good at getting on with strangers.

- Ans ☒ 1. ACDB
- ☒ 2. DCBA
- ☒ 3. DBAC
- ☒ 4. CBAD

Question ID : 630680403664  
Option 1 ID : 6306801574149  
Option 2 ID : 6306801574146  
Option 3 ID : 6306801574147  
Option 4 ID : 6306801574148  
Status : Answered  
Chosen Option : 1

Q.13 Select the most appropriate synonym of the given word.

Overwrought

- Ans ☒ 1. Unruffled
- ☒ 2. Composed
- ☒ 3. Tranquil
- ☒ 4. Agitated

Question ID : 630680403682  
Option 1 ID : 6306801574221  
Option 2 ID : 6306801574218  
Option 3 ID : 6306801574219  
Option 4 ID : 6306801574220  
Status : Answered  
Chosen Option : 4

**Q.14** Sentences of a paragraph are given below in jumbled order. Arrange the sentences in the correct order to form a meaningful and coherent paragraph.

- A.** Breakfast over, I sat on the grass in front of the Rest House admiring the gorgeous view and making plans.
- B.** When I returned to the Rest House after an absence of twenty-four hours, no surprise was expressed, and no questions asked.
- C.** A hot bath was ready, clean clothes laid out, and within a very short time I was sitting down to a breakfast of porridge, scrambled eggs, hot chapattis and honey.
- D.** In no other part of the world, I imagine, are servants as tolerant of the vagaries of their masters as in India.

- Ans**
- ☒ 1. ABCD
  - ☒ 2. ACBD
  - ☒ 3. DBCA
  - ☒ 4. DACB

Question ID : 630680403662  
Option 1 ID : 6306801574138  
Option 2 ID : 6306801574139  
Option 3 ID : 6306801574141  
Option 4 ID : 6306801574140  
Status : Answered  
Chosen Option : 3

**Comprehension:**

In the following passage some words have been deleted. Fill in the blanks with the help of the alternatives given. Select the most appropriate option for each number.

When it (1) \_\_\_\_\_ Pannu, Pannu saw it. He put his arms over his head and (2) \_\_\_\_\_ rigid. The shadow stopped about a foot beyond Pannu. Its arm came out from its side, dropped, and was still. Then it (3) \_\_\_\_\_ and moved back across Pannu and walked along the porch.

**SubQuestion No : 15**

**Q.15** Select the most appropriate option to fill in the blank No. 3.

- Ans**
- ☒ 1. crossed
  - ☒ 2. returned
  - ☒ 3. recovered
  - ☒ 4. turned

Question ID : 630680385619  
Option 1 ID : 6306801503236  
Option 2 ID : 6306801503234  
Option 3 ID : 6306801503237  
Option 4 ID : 6306801503235  
Status : Answered  
Chosen Option : 1

**Comprehension:**

In the following passage some words have been deleted. Fill in the blanks with the help of the alternatives given. Select the most appropriate option for each number.

When it (1) \_\_\_\_\_ Pannu, Pannu saw it. He put his arms over his head and (2) \_\_\_\_\_ rigid. The shadow stopped about a foot beyond Pannu. Its arm came out from its side, dropped, and was still. Then it (3) \_\_\_\_\_ and moved back across Pannu and walked along the porch.

**SubQuestion No : 16**

**Q.16** Select the most appropriate option to fill in the blank No. 1.

- Ans ☒ 1. moved  
☒ 2. crossed  
☒ 3. slipped  
☒ 4. acrossed

Question ID : 630680385617  
Option 1 ID : 6306801503228  
Option 2 ID : 6306801503226  
Option 3 ID : 6306801503229  
Option 4 ID : 6306801503227  
Status : Answered  
Chosen Option : 1

**Comprehension:**

In the following passage some words have been deleted. Fill in the blanks with the help of the alternatives given. Select the most appropriate option for each number.

When it (1) \_\_\_\_\_ Pannu, Pannu saw it. He put his arms over his head and (2) \_\_\_\_\_ rigid. The shadow stopped about a foot beyond Pannu. Its arm came out from its side, dropped, and was still. Then it (3) \_\_\_\_\_ and moved back across Pannu and walked along the porch.

**SubQuestion No : 17**

**Q.17** Select the most appropriate option to fill in the blank No. 2.

- Ans ☒ 1. went  
☒ 2. becomes  
☒ 3. got  
☒ 4. gets

Question ID : 630680385618  
Option 1 ID : 6306801503233  
Option 2 ID : 6306801503230  
Option 3 ID : 6306801503231  
Option 4 ID : 6306801503232  
Status : Answered  
Chosen Option : 3

**Q.18** Select the most appropriate option that can substitute the underlined segment in the given sentence.

The school has declared a prize to be given to one who collects stamps and has the best collection.

- Ans    ☒ 1. a philatelist  
☐ 2. a philanthropist  
☐ 3. a misologist  
☐ 4. a narcissist

Question ID : 630680403669  
Option 1 ID : 6306801574167  
Option 2 ID : 6306801574166  
Option 3 ID : 6306801574169  
Option 4 ID : 6306801574168  
Status : Answered  
Chosen Option : 1

**Comprehension:**

Read the given passage and answer the questions that follow.

The ultimate goal of NASA's exoplanet program is to find unmistakable signs of current life on a planet beyond Earth. How soon that can happen depends on two unknowns: the prevalence of life in the galaxy and how lucky we get as we take those first, tentative, exploratory steps. Our early planet finding missions, such as NASA's Kepler and its extended incarnation, K2, or the coming James Webb Space Telescope, could yield bare bones evidence of the potentially habitable worlds. James Webb, designed in part to investigate gas giants and super Earths, might find an outsized version of our planet. NASA's Nancy Grace Roman Space Telescope or the Wide-Field Infrared Survey Telescope, could zero in on a distant planet's reflected light to detect the signatures of oxygen, water vapour, or some other powerful indication of possible life.

But unless we get lucky, the search for signs of life could take decades. Discovering another blue-white marble hidden in the star field, like a sand grain on the beach, will probably require an even larger imaging telescope. Designs are already underway for that next-generation planet finder, to be sent aloft in the 2030s or 2040s.

MIT physics professor Sara Seager looks for possible chemical combinations that could signal the presence of alien life. She and her biochemistry colleagues first focused on the six main elements associated with life on Earth: carbon, nitrogen, oxygen, phosphorous, sulphur, and hydrogen.

"We're going to have so few planets, we have to get lucky," Seager said. "I don't want to miss anything. I don't want to miss it because we weren't smart enough to think of some molecule."

**SubQuestion No : 19**

**Q.19** Select the most appropriate title for the passage.

- Ans    ☐ 1. Work Pressure at NASA  
☐ 2. Lack of Good Telescopes  
☒ 3. Search for Life beyond Earth  
☐ 4. Work done at MIT

Question ID : 630680403686  
Option 1 ID : 6306801574231  
Option 2 ID : 6306801574230  
Option 3 ID : 6306801574233  
Option 4 ID : 6306801574232  
Status : Not Answered  
Chosen Option : --

**Comprehension:**

Read the given passage and answer the questions that follow.

The ultimate goal of NASA's exoplanet program is to find unmistakable signs of current life on a planet beyond Earth. How soon that can happen depends on two unknowns: the prevalence of life in the galaxy and how lucky we get as we take those first, tentative, exploratory steps. Our early planet finding missions, such as NASA's Kepler and its extended incarnation, K2, or the coming James Webb Space Telescope, could yield bare bones evidence of the potentially habitable worlds. James Webb, designed in part to investigate gas giants and super Earths, might find an outsized version of our planet. NASA's Nancy Grace Roman Space Telescope or the Wide-Field Infrared Survey Telescope, could zero in on a distant planet's reflected light to detect the signatures of oxygen, water vapour, or some other powerful indication of possible life.

But unless we get lucky, the search for signs of life could take decades. Discovering another blue-white marble hidden in the star field, like a sand grain on the beach, will probably require an even larger imaging telescope. Designs are already underway for that next-generation planet finder, to be sent aloft in the 2030s or 2040s.

MIT physics professor Sara Seager looks for possible chemical combinations that could signal the presence of alien life. She and her biochemistry colleagues first focused on the six main elements associated with life on Earth: carbon, nitrogen, oxygen, phosphorous, sulphur, and hydrogen.

"We're going to have so few planets, we have to get lucky," Seager said. "I don't want to miss anything. I don't want to miss it because we weren't smart enough to think of some molecule."

**SubQuestion No : 20**

**Q.20 Which word in the passage means 'suitable to live in'?**

- Ans**    ☒ 1. Habitable  
         ☐ 2. Exoplanet  
         ☐ 3. Outsized  
         ☐ 4. Incarnation

Question ID : **630680403688**

Option 1 ID : **6306801574239**

Option 2 ID : **6306801574238**

Option 3 ID : **6306801574241**

Option 4 ID : **6306801574240**

Status : **Answered**

Chosen Option : **1**



**Comprehension:**

Read the given passage and answer the questions that follow.

The ultimate goal of NASA's exoplanet program is to find unmistakable signs of current life on a planet beyond Earth. How soon that can happen depends on two unknowns: the prevalence of life in the galaxy and how lucky we get as we take those first, tentative, exploratory steps. Our early planet finding missions, such as NASA's Kepler and its extended incarnation, K2, or the coming James Webb Space Telescope, could yield bare bones evidence of the potentially habitable worlds. James Webb, designed in part to investigate gas giants and super Earths, might find an outsized version of our planet. NASA's Nancy Grace Roman Space Telescope or the Wide-Field Infrared Survey Telescope, could zero in on a distant planet's reflected light to detect the signatures of oxygen, water vapour, or some other powerful indication of possible life.

But unless we get lucky, the search for signs of life could take decades. Discovering another blue-white marble hidden in the star field, like a sand grain on the beach, will probably require an even larger imaging telescope. Designs are already underway for that next-generation planet finder, to be sent aloft in the 2030s or 2040s.

MIT physics professor Sara Seager looks for possible chemical combinations that could signal the presence of alien life. She and her biochemistry colleagues first focused on the six main elements associated with life on Earth: carbon, nitrogen, oxygen, phosphorous, sulphur, and hydrogen.

"We're going to have so few planets, we have to get lucky," Seager said. "I don't want to miss anything. I don't want to miss it because we weren't smart enough to think of some molecule."

**SubQuestion No : 21**

**Q.21 What is the specialty of NASA's Nancy Grace Roman Space Telescope that is NOT present in any other telescopes?**

- Ans**
- ☒ 1. It can give evidence of potentially habitable worlds.
  - ☒ 2. It is designed to investigate gas giants and super Earths.
  - ☒ 3. It is the largest next-generation imaging telescope.
  - ☒ 4. It can zero in on the reflected light of a distant planet.

Question ID : 630680403689

Option 1 ID : 6306801574243

Option 2 ID : 6306801574244

Option 3 ID : 6306801574242

Option 4 ID : 6306801574245

Status : Answered

Chosen Option : 4



**Comprehension:**

Read the given passage and answer the questions that follow.

The ultimate goal of NASA's exoplanet program is to find unmistakable signs of current life on a planet beyond Earth. How soon that can happen depends on two unknowns: the prevalence of life in the galaxy and how lucky we get as we take those first, tentative, exploratory steps. Our early planet finding missions, such as NASA's Kepler and its extended incarnation, K2, or the coming James Webb Space Telescope, could yield bare bones evidence of the potentially habitable worlds. James Webb, designed in part to investigate gas giants and super Earths, might find an outsized version of our planet. NASA's Nancy Grace Roman Space Telescope or the Wide-Field Infrared Survey Telescope, could zero in on a distant planet's reflected light to detect the signatures of oxygen, water vapour, or some other powerful indication of possible life.

But unless we get lucky, the search for signs of life could take decades. Discovering another blue-white marble hidden in the star field, like a sand grain on the beach, will probably require an even larger imaging telescope. Designs are already underway for that next-generation planet finder, to be sent aloft in the 2030s or 2040s.

MIT physics professor Sara Seager looks for possible chemical combinations that could signal the presence of alien life. She and her biochemistry colleagues first focused on the six main elements associated with life on Earth: carbon, nitrogen, oxygen, phosphorous, sulphur, and hydrogen.

"We're going to have so few planets, we have to get lucky," Seager said. "I don't want to miss anything. I don't want to miss it because we weren't smart enough to think of some molecule."

**SubQuestion No : 22**

**Q.22 Why did Sara Seager and her colleagues focus on the six elements present in the Earth?**

- Ans    ☒ 1. These elements signal the presence of life.
- ☐ 2. These elements are the scientists' specialisation.
- ☐ 3. These elements can be seen by a telescope.
- ☐ 4. These elements are present in all the planets.

Question ID : 630680403687

Option 1 ID : 6306801574236

Option 2 ID : 6306801574237

Option 3 ID : 6306801574235

Option 4 ID : 6306801574234

Status : Answered

Chosen Option : 1

**Q.23 Select the most appropriate ANTONYM of the underlined word.**

He may falter in his attempts, but he will never stop.

- Ans    ☐ 1. Demur
- ☐ 2. Dither
- ☒ 3. Persist
- ☐ 4. Fluctuate

Question ID : 630680403680

Option 1 ID : 6306801574211

Option 2 ID : 6306801574212

Option 3 ID : 6306801574213

Option 4 ID : 6306801574210

Status : Answered

Chosen Option : 3

Q.24 Select the most appropriate option to fill in the blank.

Three fives \_\_\_\_\_ fifteen.

- Ans ☒ 1. were  
☒ 2. are  
☒ 3. is  
☒ 4. be

Question ID : 630680403654

Option 1 ID : 6306801574108

Option 2 ID : 6306801574109

Option 3 ID : 6306801574107

Option 4 ID : 6306801574106

Status : Answered

Chosen Option : 2

Q.25 Select the most appropriate option to fill in the blank.

I met your brother at the party, he asked \_\_\_\_\_ you.

- Ans ☒ 1. upon  
☒ 2. after  
☒ 3. into  
☒ 4. with

Question ID : 630680403655

Option 1 ID : 6306801574113

Option 2 ID : 6306801574111

Option 3 ID : 6306801574112

Option 4 ID : 6306801574110

Status : Answered

Chosen Option : 2

