



Teachingninja.in



Latest Govt Job updates



Private Job updates



Free Mock tests available



Visit - teachingninja.in

DDA ASO

Previous Year Paper
25 Sept, 2023 Shift 2





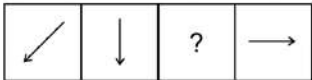
DELHI DEVELOPMENT AUTHORITY
RECRUITMENT CELL
VIKAS SADAN, INA, NEW DELHI - 110023
(<https://www.dda.gov.in>)

Advertisement No. 02/2023/Recrtt. Cell/Pers./DDA

Test Date	25/09/2023
Test Time	11:30 AM - 12:30 PM
Subject	Assistant Section Officer (ASO)

Section : General Intelligence and Reasoning

Q.1 The given figure consists of a series with a question mark. Find out the alternative for the question mark that completes the series from the given options.
Question figure:

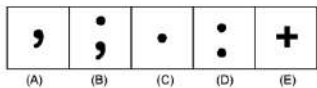


Ans

- ✖ 1.
- ✔ 2.
- ✖ 3.
- ✖ 4.

Question ID : 630680384641
Option 1 ID : 6306801499451
Option 2 ID : 6306801499450
Option 3 ID : 6306801499453
Option 4 ID : 6306801499452
Status : Answered
Chosen Option : 2

Q.2 Out of the five figures marked (A), (B), (C), (D) and (E), four are similar in a certain manner and one figure is not like the other four. Identify the figure which is different from the rest.



- Ans**
- ☒ 1. B
 - ☒ 2. E
 - ☒ 3. D
 - ☒ 4. A

Question ID : 630680384643
Option 1 ID : 6306801499459
Option 2 ID : 6306801499458
Option 3 ID : 6306801499460
Option 4 ID : 6306801499461
Status : Not Answered
Chosen Option : --

Q.3 If the position of first and the third digits within each number are interchanged, which of the following will be the third digit of the fourth highest number?

8621 3457 2510 6564 9627 2583

- Ans**
- ☒ 1. 7
 - ☒ 2. 9
 - ☒ 3. 6
 - ☒ 4. 3

Question ID : 630680384553
Option 1 ID : 6306801499099
Option 2 ID : 6306801499098
Option 3 ID : 6306801499101
Option 4 ID : 6306801499100
Status : Answered
Chosen Option : 2

Q.4 Identify the odd letter cluster triad from the given options.

- Ans**
- ☒ 1. (BFT, FIV, JLX)
 - ☒ 2. (OWA, SYC, WAE)
 - ☒ 3. (JSL, NVN, RYP)
 - ☒ 4. (DSP, HVR, LYT)

Question ID : 630680384608
Option 1 ID : 6306801499320
Option 2 ID : 6306801499318
Option 3 ID : 6306801499321
Option 4 ID : 6306801499319
Status : Answered
Chosen Option : 2

Q.5 Select the odd number in the following number series.

3.03, 3.16, 3.22, 3.31, 3.43, 3.58

Ans ☒ 1. 3.58

☒ 2. 3.31

☒ 3. 3.22

☒ 4. 3.03

Question ID : 630680384702

Option 1 ID : 6306801499697

Option 2 ID : 6306801499696

Option 3 ID : 6306801499695

Option 4 ID : 6306801499694

Status : Answered

Chosen Option : 4

Q.6 If '+' stands for 'division', '*' stands for 'addition', '-' stands for 'multiplication' and '-' stands for 'subtraction', then solve the following expression:

$15 - 2 \div 6 \times 4 + 2$

Ans ☒ 1. 24

☒ 2. 22

☒ 3. 26

☒ 4. 28

Question ID : 630680384565

Option 1 ID : 6306801499147

Option 2 ID : 6306801499149

Option 3 ID : 6306801499148

Option 4 ID : 6306801499146

Status : Answered

Chosen Option : 3

Q.7 Carlos said, "This girl is the wife of the son's son of my mother." Who is Carlos to the girl ?

Ans ☒ 1. Father

☒ 2. Paternal grandfather

☒ 3. Father-in-law

☒ 4. Husband

Question ID : 630680386172

Option 1 ID : 6306801505398

Option 2 ID : 6306801505399

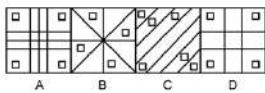
Option 3 ID : 6306801505400

Option 4 ID : 6306801505401

Status : Answered

Chosen Option : 3

Q.8 Out of the four figures marked (A), (B) , (C) , and (D), three are similar in a certain manner and one figure is not like the other three.
Identify the figure which is different from the rest.



- Ans
- ☒ 1. A
 - ☒ 2. B
 - ☒ 3. D
 - ☒ 4. C

Question ID : 630680386225
Option 1 ID : 6306801505610
Option 2 ID : 6306801505611
Option 3 ID : 6306801505613
Option 4 ID : 6306801505612
Status : Answered
Chosen Option : 4

Q.9 Find the missing element in the given set to make them equal.

A = {Letters of the word DELICATE}

B = {DL, CT, ?, AE}

- Ans
- ☒ 1. TC
 - ☒ 2. EI
 - ☒ 3. EL
 - ☒ 4. IA

Question ID : 630680384597
Option 1 ID : 6306801499275
Option 2 ID : 6306801499276
Option 3 ID : 6306801499277
Option 4 ID : 6306801499274
Status : Answered
Chosen Option : 2

Q.10 Which of the following letter will replace the question mark (?) in the given series?

L, I, F, C, Z, ?

- Ans
- ☒ 1. A
 - ☒ 2. D
 - ☒ 3. C
 - ☒ 4. W

Question ID : 630680384725
Option 1 ID : 6306801499787
Option 2 ID : 6306801499789
Option 3 ID : 6306801499788
Option 4 ID : 6306801499786
Status : Answered
Chosen Option : 4

Q.11 Consider the following table where each letter is denoted by a symbol or a digit as shown.
Read the given conditions carefully and identify combinations that correctly represents 'KOUSAWSXW' based on the following coding system and the conditions that follow.

Conditions:

- (i) If the first letter is a vowel and the last letter is a consonant, both are to be coded as the code of vowel
- (ii) If both first and last letters are consonants, both are to coded as 'S'
- (iii) If first letter is a consonant and last letter is a vowel, the codes for first and last letters are to be interchanged

Digit / Symbol	0	1	2	+	\$	3	1	7	4	8	?	6	^
Letter	O	J	D	F	S	K	I	L	U	E	W	X	A

- Ans
- ☒ 1. S04^S?S6S
 - ☒ 2. S04S^SS6S
 - ☒ 3. S048^SS6S
 - ☒ 4. S04S^?S6S

Question ID : 630680386176
Option 1 ID : 6306801505417
Option 2 ID : 6306801505415
Option 3 ID : 6306801505414
Option 4 ID : 6306801505416
Status : Answered
Chosen Option : 4

Q.12 In the following question two statements numbered I and II are given. There may be cause-and-effect relationship between the two statements. These two statements may be the effect of the same cause or independent causes. These statements may be independent cause without having any relationship. Read both the statements carefully and choose the most appropriate option.

Statements:

- I. The city administration has announced a special tax relief package for the new manufacturing industries to be set up in the area.
- II. Last year the city administration hiked the taxes for all industrial activities in the area.

- Ans
- ☒ 1. if both the statements (I) and (II) are independent causes
 - ☒ 2. if both the statements (I) and (II) are effects of independent causes
 - ☒ 3. if statement (II) is the cause and statement (I) is its effect
 - ☒ 4. if statement (I) is the cause and statement (II) is its effect

Question ID : 630680386182
Option 1 ID : 6306801505440
Option 2 ID : 6306801505441
Option 3 ID : 6306801505439
Option 4 ID : 6306801505438
Status : Answered
Chosen Option : 2

Q.13 Replace the question mark (?) in the following series with suitable option:
YMBR, XNCP, WODN, ?

- Ans
- ☒ 1. MLOL
 - ☒ 2. VPDM
 - ☒ 3. WPDN
 - ☒ 4. VPDL

Question ID : 630680384620
Option 1 ID : 6306801499368
Option 2 ID : 6306801499366
Option 3 ID : 6306801499369
Option 4 ID : 6306801499367
Status : Answered
Chosen Option : 4

- Q.14 If ' $M \times N$ ' means 'M is the father of N'.
If ' $M + N$ ' means 'M is the mother of N'.
If ' $M \div N$ ' means 'M is the sister of N'.
If ' $M - N$ ' means 'M is the brother of N'.

How is T related to S in the expression ' $T + U \times C - S$ ' ?

- Ans ☒ 1. Mother
☒ 2. Sister
☒ 3. Grandmother
☒ 4. Daughter

Question ID : 630680384468
Option 1 ID : 6306801498758
Option 2 ID : 6306801498759
Option 3 ID : 6306801498761
Option 4 ID : 6306801498760
Status : Answered
Chosen Option : 3

- Q.15 Arman, Bhavya, Chahel, Dheeraj, Era and Farah are seated in a circle facing the centre. Dheeraj is between Farah and Bhavya.
Arman is second to the left of Dheeraj and second to the right of Era. Who is sitting opposite to Dheeraj?

- Ans ☒ 1. Arman
☒ 2. Era
☒ 3. Bhavya
☒ 4. Chahel

Question ID : 630680384618
Option 1 ID : 6306801499358
Option 2 ID : 6306801499359
Option 3 ID : 6306801499361
Option 4 ID : 6306801499360
Status : Answered
Chosen Option : 4

- Q.16 If the unit's digits of each number are increased by 2 and the hundred's digit is decreased by 2, then which of the following will be the least number thus formed?

432 573 715 346 604

- Ans ☒ 1. 148
☒ 2. 268
☒ 3. 234
☒ 4. 124

Question ID : 630680384656
Option 1 ID : 6306801499510
Option 2 ID : 6306801499513
Option 3 ID : 6306801499511
Option 4 ID : 6306801499512
Status : Answered
Chosen Option : 1

Q.17 Which of the following numbers will replace the question mark (?) in the given series?
29, 63, 36, 68, 43, ?

- Ans**
- ☒ 1. 50
 - ☒ 2. 48
 - ☒ 3. 69
 - ☒ 4. 73

Question ID : 630680384659
Option 1 ID : 6306801499524
Option 2 ID : 6306801499523
Option 3 ID : 6306801499525
Option 4 ID : 6306801499522
Status : Answered
Chosen Option : 4

Q.18 Which of the following option follows the same relation within each alphanumeric cluster as shown below?
[L3][O6][T2][Y7]

- Ans**
- ☒ 1. [U3][F6][Q7][T8]
 - ☒ 2. [W5][K2][P5][H9]
 - ☒ 3. [O6][P7][E5][N5]
 - ☒ 4. [B3][K8][S4][G7]

Question ID : 630680384592
Option 1 ID : 6306801499254
Option 2 ID : 6306801499255
Option 3 ID : 6306801499257
Option 4 ID : 6306801499256
Status : Answered
Chosen Option : 3

Q.19 In the following question three statements are given, followed by two conclusions numbered I and II. Assume three given statements to be true even if they seem to be at variance with commonly known facts and then decide which of the given conclusion logically follows from the two statements disregarding commonly known facts.
Statement:

Some stars are planets.
Some planets are moons.
Some moons are suns.

Conclusions:

- I. Some suns are stars.
II. Some suns are planets.

- Ans**
- ☒ 1. If conclusion II follows
 - ☒ 2. If neither conclusion I nor II follows
 - ☒ 3. If conclusion I follow
 - ☒ 4. If both conclusion I and II follows

Question ID : 630680384829
Option 1 ID : 6306801500203
Option 2 ID : 6306801500205
Option 3 ID : 6306801500202
Option 4 ID : 6306801500204
Status : Answered
Chosen Option : 2

Q.20 Consider the following table where each letter is denoted by a symbol or a digit as shown.
Read the given conditions carefully and identify combinations that correctly represents 'KIRLAGU' based on the following coding system and the conditions that follow.

Conditions:

- (i) If the first letter is a vowel and the last letter is a consonant, both are to be coded as the code of vowel
- (ii) If both first and last letters are consonants, both are to coded as 'I'
- (iii) If first letter is a consonant and last letter is a vowel, the codes for first and last letters are to be interchanged

Digit / Symbol	1	5	*	6	9	2	!	3	7	%	4	8	?
Letter	R	G	W	D	K	B	I	P	U	E	V	A	L

- Ans
- ☒ 1. 7!1?859
 - ☐ 2. 9!1?857
 - ☐ 3. 71!?859
 - ☐ 4. !!1?85!

Question ID : 630680386178
Option 1 ID : 6306801505422
Option 2 ID : 6306801505423
Option 3 ID : 6306801505425
Option 4 ID : 6306801505424
Status : Answered
Chosen Option : 1

Q.21 How many symbols are there in the given series that are immediately preceded by a number and immediately followed by a symbol?
5 * 7 ? 1 > 6 & 5 ^ 4 ! 1 8 @ 3 6 # ! 9 2 * 5 # 4 ? 2 / 9 % 3 + 4 @ * 8 & 1 6 - 7 + 8

- Ans
- ☐ 1. 4
 - ☐ 2. 1
 - ☒ 3. 2
 - ☐ 4. 3

Question ID : 630680384754
Option 1 ID : 6306801499905
Option 2 ID : 6306801499902
Option 3 ID : 6306801499903
Option 4 ID : 6306801499904
Status : Answered
Chosen Option : 3

Q.22 In the following question three statements are given, followed by two conclusions numbered I and II. Assume three given statements to be true even if they seem to be at variance with commonly known facts and then decide which of the given conclusion logically follows from the two statements disregarding commonly known facts.

Statements:

- All rings are pots.
- No pot is paint.
- Some paints are bangles.

Conclusions:

- I. Some bangles are rings.
- II. Some bangles are pots

- Ans
- ☒ 1. Neither conclusion I nor II follows
 - ☐ 2. Both conclusion I and II follow
 - ☐ 3. Only conclusion I follows
 - ☐ 4. Only conclusion II follows

Question ID : 630680384634
Option 1 ID : 6306801499425
Option 2 ID : 6306801499424
Option 3 ID : 6306801499422
Option 4 ID : 6306801499423
Status : Answered
Chosen Option : 1

Q.23 Which of the following numbers will replace the question mark (?) in the given series?
350, 360, ?, 361, 348, 362

- Ans**
- ☒ 1. 363
 - ☒ 2. 349
 - ☒ 3. 369
 - ☒ 4. 353

Question ID : 630680384698
Option 1 ID : 6306801499679
Option 2 ID : 6306801499678
Option 3 ID : 6306801499681
Option 4 ID : 6306801499680
Status : Answered
Chosen Option : 2

Q.24 In the following question, four pairs of letter-cluster have been given out of which three are alike in some manner, while one is different. Select the odd pair from the given options.

- Ans**
- ☒ 1. LDS - OAV
 - ☒ 2. HOP - KLR
 - ☒ 3. HMU - KJX
 - ☒ 4. MJR - PGU

Question ID : 630680384604
Option 1 ID : 6306801499304
Option 2 ID : 6306801499303
Option 3 ID : 6306801499302
Option 4 ID : 6306801499305
Status : Answered
Chosen Option : 2

Q.25 There are five boxes labelled as P, Q, R, S, and T in a vertical arrangement. P is placed below Q but above T. R is at the top of the arrangement. S is below Q but above P. Which box is placed below R but above S?

- Ans**
- ☒ 1. Q
 - ☒ 2. T
 - ☒ 3. P
 - ☒ 4. Data inadequate

Question ID : 630680384614
Option 1 ID : 6306801499342
Option 2 ID : 6306801499343
Option 3 ID : 6306801499344
Option 4 ID : 6306801499345
Status : Answered
Chosen Option : 1

Section : General Awareness

Q.1 The "National Rural Employment Guarantee Act" (NREGA) guarantees a minimum number of days of wage employment to rural households. How many days of wage employment is guaranteed under this act?

- Ans
- ☒ 1. 1000
 - ☒ 2. 180
 - ☒ 3. 100
 - ☒ 4. 365

Question ID : 630680384179
Option 1 ID : 6306801497607
Option 2 ID : 6306801497606
Option 3 ID : 6306801497608
Option 4 ID : 6306801497609
Status : Answered
Chosen Option : 3

Q.2 In which of the following states in India is Gurupurab celebrated?

- Ans
- ☒ 1. Arunachal Pradesh
 - ☒ 2. Gujrat
 - ☒ 3. Punjab
 - ☒ 4. Assam

Question ID : 630680384278
Option 1 ID : 6306801498001
Option 2 ID : 6306801497998
Option 3 ID : 6306801497999
Option 4 ID : 6306801498000
Status : Answered
Chosen Option : 3

Q.3 "The Namesake" is a novel that delves into themes of identity, culture, and belonging. Who is the author of this book?

- Ans
- ☒ 1. Jhumpa Lahiri
 - ☒ 2. Salman Rushdie
 - ☒ 3. Amitav Ghosh
 - ☒ 4. Arundhati Roy

Question ID : 630680384164
Option 1 ID : 6306801497548
Option 2 ID : 6306801497546
Option 3 ID : 6306801497549
Option 4 ID : 6306801497547
Status : Answered
Chosen Option : 1

Q.4 Who was the fifth President of India?

- Ans
- ☒ 1. Fakhruddin Ali Ahmed
 - ☒ 2. B.R. Ambedkar
 - ☒ 3. Mahatma Gandhi
 - ☒ 4. Jawaharlal Nehru

Question ID : 630680384441
Option 1 ID : 6306801498651
Option 2 ID : 6306801498653
Option 3 ID : 6306801498652
Option 4 ID : 6306801498650
Status : Answered
Chosen Option : 1

Q.5 Who was the founder of the Brahmo Samaj, a socio-religious reform movement in 19th-century India?

- Ans
- ☒ 1. Ramakrishna Paramahansa
 - ☒ 2. Dayananda Saraswati
 - ☒ 3. Raja Ram Mohan Roy
 - ☒ 4. Swami Vivekananda

Question ID : 630680384442
Option 1 ID : 6306801498657
Option 2 ID : 6306801498656
Option 3 ID : 6306801498655
Option 4 ID : 6306801498654
Status : Answered
Chosen Option : 3

Q.6 In which year first synchronous Census took place in India?

- Ans
- ☒ 1. 1986
 - ☒ 2. 1881
 - ☒ 3. 1980
 - ☒ 4. 1880

Question ID : 630680386467
Option 1 ID : 6306801506581
Option 2 ID : 6306801506580
Option 3 ID : 6306801506579
Option 4 ID : 6306801506578
Status : Answered
Chosen Option : 2

Q.7 Which prestigious literary award is given annually to the author of the best original novel written in English and published in the United Kingdom?

- Ans
- ☒ 1. Nobel Prize in Literature
 - ☒ 2. Pulitzer Prize
 - ☒ 3. National Book Award
 - ☒ 4. Man Booker Prize

Question ID : 630680384392
Option 1 ID : 6306801498456
Option 2 ID : 6306801498454
Option 3 ID : 6306801498457
Option 4 ID : 6306801498455
Status : Answered
Chosen Option : 2

Q.8 Which is India's most polluted city in 2023?

- Ans
- ☒ 1. Asopur
 - ☒ 2. Bhiwadi
 - ☒ 3. Patna
 - ☒ 4. New Delhi

Question ID : 630680386405
Option 1 ID : 6306801506333
Option 2 ID : 6306801506330
Option 3 ID : 6306801506332
Option 4 ID : 6306801506331
Status : Answered
Chosen Option : 4

Q.9 In 2023, India launched its first-ever indigenously developed operating system for smartphones and other devices. What is the name of this OS?

- Ans
- ☒ 1. BharatOS
 - ☒ 2. BharOS
 - ☒ 3. DeshOS
 - ☒ 4. IndiOS

Question ID : 630680384137
Option 1 ID : 6306801497440
Option 2 ID : 6306801497438
Option 3 ID : 6306801497441
Option 4 ID : 6306801497439
Status : Answered
Chosen Option : 2

Q.10 As per the Central Bureau Investigation (CBI), in July 2023 corruption cases were registered against officers of the _____ in Madhya Pradesh's Jabalpur.

- Ans
- ☒ 1. Indian Administrative Service
 - ☒ 2. Indian Revenue Service
 - ☒ 3. Military Engineering Services
 - ☒ 4. Indian Police Service

Question ID : 630680384143
Option 1 ID : 6306801497465
Option 2 ID : 6306801497462
Option 3 ID : 6306801497464
Option 4 ID : 6306801497463
Status : Not Answered
Chosen Option : --

Q.11 Which region of India experiences heavy rainfall during the monsoon season, typically lasting from June to September?

- Ans
- ☒ 1. Himalayan region
 - ☒ 2. Western Ghats
 - ☒ 3. Thar Desert
 - ☒ 4. Deccan Plateau

Question ID : 630680386458
Option 1 ID : 6306801506542
Option 2 ID : 6306801506544
Option 3 ID : 6306801506543
Option 4 ID : 6306801506545
Status : Answered
Chosen Option : 1

Q.12 Which of the following microfinance institutions is also known as the Universal Bank?

- Ans
- ☒ 1. NABARD
 - ☒ 2. Fusion Microfinance
 - ☒ 3. Arohan Financial Services Ltd.
 - ☒ 4. Bandhan Financial Services Private Ltd.

Question ID : 630680384289
Option 1 ID : 6306801498045
Option 2 ID : 6306801498043
Option 3 ID : 6306801498042
Option 4 ID : 6306801498044
Status : Answered
Chosen Option : 1

Q.13 Who founded the Banaras Hindu University in the year 1916?

- Ans
- ☒ 1. Jagdish Chandra Bose
 - ☒ 2. Rabindranath Tagore
 - ☒ 3. Madan Mohan Malaviya
 - ☒ 4. Raja Ram Mohan Roy

Question ID : 630680384132
Option 1 ID : 6306801497420
Option 2 ID : 6306801497421
Option 3 ID : 6306801497419
Option 4 ID : 6306801497418
Status : Answered
Chosen Option : 3

Q.14 The "Green India Mission" launched by the Indian government aims to:

- Ans
- ☒ 1. Implement renewable energy projects across the country
 - ☒ 2. Reduce carbon emissions from industries and vehicles
 - ☒ 3. Promote organic farming and reduce the use of chemical fertilizers
 - ☒ 4. Enhance afforestation and forest conservation

Question ID : 630680384187
Option 1 ID : 6306801497640
Option 2 ID : 6306801497641
Option 3 ID : 6306801497638
Option 4 ID : 6306801497639
Status : Answered
Chosen Option : 1

Q.15 Who won the Major Dhyan Chand Khel Ratna award in 2022?

- Ans
- ☒ 1. Sharath Kamal
 - ☒ 2. Eldhose Paul
 - ☒ 3. Seema Punia
 - ☒ 4. Avinash Sable

Question ID : 630680384151
Option 1 ID : 6306801497495
Option 2 ID : 6306801497497
Option 3 ID : 6306801497496
Option 4 ID : 6306801497494
Status : Not Answered
Chosen Option : --

Q.16 Who among the following releases the Multidimensional Poverty Index (MPI)?

- Ans
- ☒ 1. WHO
 - ☒ 2. World Bank
 - ☒ 3. UNESCO
 - ☒ 4. UNDP

Question ID : 630680384298
Option 1 ID : 6306801498080
Option 2 ID : 6306801498078
Option 3 ID : 6306801498081
Option 4 ID : 6306801498079
Status : Answered
Chosen Option : 4

Q.17 Which river forms the famous Jog Falls, the second-highest plunge waterfall in India?

- Ans ☒ 1. Godavari River
☒ 2. Cauvery River
☒ 3. Sharavati River
☒ 4. Tapti River

Question ID : 630680384426
Option 1 ID : 6306801498590
Option 2 ID : 6306801498591
Option 3 ID : 6306801498593
Option 4 ID : 6306801498592
Status : Answered
Chosen Option : 3

Q.18 Which foreign invader, originally from Central Asia, invaded and established a prominent Islamic empire in northern India during the 12th century?

- Ans ☒ 1. Muhammad Ghori
☒ 2. Mahmud of Ghazni
☒ 3. Mohammed Bin Qasim
☒ 4. Alauddin Khilji

Question ID : 630680386475
Option 1 ID : 6306801506611
Option 2 ID : 6306801506610
Option 3 ID : 6306801506613
Option 4 ID : 6306801506612
Status : Answered
Chosen Option : 1

Q.19 Who is the author of the book LeBron Life Lessons from the King published in March 2023?

- Ans ☒ 1. Gilang Bogy
☒ 2. Jeff Benedict
☒ 3. Nelson Pena
☒ 4. Brian Boone

Question ID : 630680386413
Option 1 ID : 6306801506365
Option 2 ID : 6306801506364
Option 3 ID : 6306801506362
Option 4 ID : 6306801506363
Status : Not Answered
Chosen Option : --

Q.20 Which government initiative in India focuses on promoting the adoption of clean energy sources and reducing the dependence on fossil fuels for a sustainable future?

- Ans ☒ 1. Ujjwala Yojana
☒ 2. Pradhan Mantri Awas Yojana
☒ 3. National Solar Mission
☒ 4. Atal Mission for Rejuvenation and Urban Transformation

Question ID : 630680386453
Option 1 ID : 6306801506522
Option 2 ID : 6306801506523
Option 3 ID : 6306801506525
Option 4 ID : 6306801506524
Status : Answered
Chosen Option : 1

Q.21 Which state has the highest population in India as per census 2011?

- Ans ☒ 1. West Bengal
☒ 2. Maharashtra
☒ 3. Uttar Pradesh
☒ 4. Tamil Nadu

Question ID : 630680386464
Option 1 ID : 6306801506567
Option 2 ID : 6306801506569
Option 3 ID : 6306801506566
Option 4 ID : 6306801506568
Status : Answered
Chosen Option : 3

Q.22 Which institution in India is responsible for conducting national-level entrance examinations for admission to engineering colleges?

- Ans ☒ 1. National Testing Agency
☒ 2. Indian Institutes of Technology
☒ 3. National Institute of Technology
☒ 4. All India Institute of Medical Sciences

Question ID : 630680384404
Option 1 ID : 6306801498505
Option 2 ID : 6306801498502
Option 3 ID : 6306801498504
Option 4 ID : 6306801498503
Status : Answered
Chosen Option : 1

Q.23 Which festival is known for its mesmerizing display of classical dance performances in the temple town of Thanjavur?

- Ans ☒ 1. Pushkar Fair
☒ 2. Navratri
☒ 3. Natyanjali Dance Festival
☒ 4. Thrissur Pooram

Question ID : 630680384397
Option 1 ID : 6306801498477
Option 2 ID : 6306801498474
Option 3 ID : 6306801498476
Option 4 ID : 6306801498475
Status : Answered
Chosen Option : 3

Q.24 Chandrayaan-3 was launched on which date?

- Ans ☒ 1. 16th Jul 2023
☒ 2. 14th Jul 2023
☒ 3. 4th Jul 2023
☒ 4. 14th Jul 2024

Question ID : 630680386395
Option 1 ID : 6306801506291
Option 2 ID : 6306801506290
Option 3 ID : 6306801506293
Option 4 ID : 6306801506292
Status : Answered
Chosen Option : 2

Q.25 Which of the following dynasties ruled over the Delhi Sultanate during the reign of Muhammad bin Tughluq?

- Ans
- ☐ 1. Sayyid dynasty
 - ☐ 2. Khilji dynasty
 - ☐ 3. Slave dynasty
 - ☒ 4. Tughlaq dynasty

Question ID : 630680386472

Option 1 ID : 6306801506601

Option 2 ID : 6306801506600

Option 3 ID : 6306801506598

Option 4 ID : 6306801506599

Status : Answered

Chosen Option : 4

Section : Quantitative Aptitude

Q.1 If the value of $(2x) + \left(\frac{2}{x}\right) = 5$, then find value of $(x^2) + \left(\frac{1}{x^2}\right)$.

- Ans
- ☐ 1. $\frac{11}{5}$
 - ☐ 2. $\frac{17}{5}$
 - ☒ 3. $\frac{17}{4}$
 - ☐ 4. $\frac{11}{4}$

Question ID : 630680384852

Option 1 ID : 6306801500297

Option 2 ID : 6306801500294

Option 3 ID : 6306801500296

Option 4 ID : 6306801500295

Status : Answered

Chosen Option : 3

Q.2 By selling an article for ₹ 5767, a man gains ₹ 625. At what price he must sell the article to get ₹ 6744 profit?

- Ans
- ☒ 1. ₹ 11,886
 - ☐ 2. ₹ 15,666
 - ☐ 3. ₹ 14,222
 - ☐ 4. ₹ 12,526

Question ID : 630680384921

Option 1 ID : 6306801500570

Option 2 ID : 6306801500573

Option 3 ID : 6306801500572

Option 4 ID : 6306801500571

Status : Answered

Chosen Option : 1

Q.3 Find the value of:

$$7.5 \div 1.5 \times 0.7 + 4.2$$

- Ans
- ☒ 1. 6.5
 - ☒ 2. 7.7
 - ☒ 3. 8.2
 - ☒ 4. 3.4

Question ID : 630680384893

Option 1 ID : 6306801500459

Option 2 ID : 6306801500460

Option 3 ID : 6306801500461

Option 4 ID : 6306801500458

Status : Answered

Chosen Option : 2

Q.4 If the value of $\operatorname{cosec}^2 M = \frac{4}{3}$, M being an acute angle, find the value of $\sin^2 M + \left(\frac{\cot^2 M}{\operatorname{cosec}^2 M} \right)$

- Ans
- ☒ 1. $\frac{1}{4}$
 - ☒ 2. 1
 - ☒ 3. 0
 - ☒ 4. $\frac{2}{3}$

Question ID : 630680385210

Option 1 ID : 6306801501726

Option 2 ID : 6306801501728

Option 3 ID : 6306801501729

Option 4 ID : 6306801501727

Status : Answered

Chosen Option : 2

Q.5 The average of 5 consecutive odd numbers is 21. Find the smallest number.

- Ans
- ☒ 1. 17
 - ☒ 2. 13
 - ☒ 3. 15
 - ☒ 4. 20

Question ID : 630680384863

Option 1 ID : 6306801500338

Option 2 ID : 6306801500341

Option 3 ID : 6306801500340

Option 4 ID : 6306801500339

Status : Answered

Chosen Option : 1

Q.6 The radius of the base of a right circular cone is 17 cm and its slant height is 35 cm. Find the curved surface area of the cone.

- Ans**
- ☒ 1. 1884 cm^2
 - ☒ 2. 1620 cm^2
 - ☒ 3. 1870 cm^2
 - ☒ 4. 1771 cm^2

Question ID : 630680384882

Option 1 ID : 6306801500416

Option 2 ID : 6306801500414

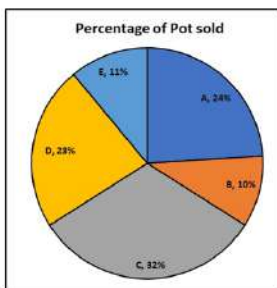
Option 3 ID : 6306801500417

Option 4 ID : 6306801500415

Status : Answered

Chosen Option : 3

Q.7 The pie chart shows the percentage of pots sold by 5 different shops. Find the average number of pots sold if the pots sold by shop E is 187.



- Ans**
- ☒ 1. 210
 - ☒ 2. 220
 - ☒ 3. 340
 - ☒ 4. 330

Question ID : 630680384869

Option 1 ID : 6306801500363

Option 2 ID : 6306801500362

Option 3 ID : 6306801500364

Option 4 ID : 6306801500365

Status : Answered

Chosen Option : 3

Q.8 A, B, and C invested in a bank scheme in the ratio 4: 7: 8 and the time of their investment are in the ratio 5: 4: 2. Find the ratio of their profit.

- Ans**
- ☒ 1. 4: 7: 8
 - ☒ 2. 5: 4: 2
 - ☒ 3. 5: 7: 4
 - ☒ 4. 20: 28: 24

Question ID : 630680384929

Option 1 ID : 6306801500602

Option 2 ID : 6306801500603

Option 3 ID : 6306801500605

Option 4 ID : 6306801500604

Status : Answered

Chosen Option : 3

Q.9 If $A : B : C = 2 : 7 : 11$ and $3A - 3B + 3C = 36$, then find the value of B.

- Ans**
- ☒ 1. 21
 - ☒ 2. 7
 - ☒ 3. 35
 - ☒ 4. 14

Question ID : 630680384932

Option 1 ID : 6306801500615

Option 2 ID : 6306801500616

Option 3 ID : 6306801500617

Option 4 ID : 6306801500614

Status : Answered

Chosen Option : 4

Q.10 Find the area of a sector of arc length 66 cm which subtends an angle of 60° on the centre?

- Ans**
- ☒ 1. 2136 cm²
 - ☒ 2. 2079 cm²
 - ☒ 3. 2129 cm²
 - ☒ 4. 2561 cm²

Question ID : 630680385008

Option 1 ID : 6306801500921

Option 2 ID : 6306801500919

Option 3 ID : 6306801500920

Option 4 ID : 6306801500918

Status : Answered

Chosen Option : 2

Q.11 Find the lateral surface area and total surface area of a cuboid of length 70 cm, breadth 33 cm and height 25 cm.

- Ans**
- ☒ 1. 5150 cm² and 8750 cm²
 - ☒ 2. 5124 cm² and 9770 cm²
 - ☒ 3. 5150 cm² and 9770 cm²
 - ☒ 4. 5124 cm² and 8750 cm²

Question ID : 630680384891

Option 1 ID : 6306801500451

Option 2 ID : 6306801500452

Option 3 ID : 6306801500453

Option 4 ID : 6306801500450

Status : Answered

Chosen Option : 3

Q.12 If the sum of the squares of two numbers is 313 and the square of the sum of the numbers is 625, then find the product of the numbers.

- Ans**
- ☒ 1. 194
 - ☒ 2. 169
 - ☒ 3. 156
 - ☒ 4. 144

Question ID : 630680384854
Option 1 ID : 6306801500305
Option 2 ID : 6306801500303
Option 3 ID : 6306801500304
Option 4 ID : 6306801500302
Status : Answered
Chosen Option : 3

Q.13 The sum of two numbers is 960. If the smaller number is increased by 10% and the bigger number is decreased by 50%, then the numbers obtained are equal. Find the numbers.

- Ans**
- ☒ 1. 360 and 600
 - ☒ 2. 420 and 540
 - ☒ 3. 300 and 660
 - ☒ 4. 400 and 560

Question ID : 630680384904
Option 1 ID : 6306801500503
Option 2 ID : 6306801500504
Option 3 ID : 6306801500502
Option 4 ID : 6306801500505
Status : Answered
Chosen Option : 3

Q.14 In a division sum, the divisor is 7 times the quotient and 5 times the remainder. If the remainder is 56, what is the dividend ?

- Ans**
- ☒ 1. 12658
 - ☒ 2. 12578
 - ☒ 3. 10258
 - ☒ 4. 11256

Question ID : 630680384996
Option 1 ID : 6306801500873
Option 2 ID : 6306801500872
Option 3 ID : 6306801500870
Option 4 ID : 6306801500871
Status : Answered
Chosen Option : 4



Q.15 The perimeters of 2 squares are 104 cm and 88 cm. Find the perimeter of a third square whose area is the difference of the area of the two squares.

- Ans
- ☒ 1. $44\sqrt{3}$ cm
 - ☒ 2. 32 cm
 - ☒ 3. $22\sqrt{2}$ cm
 - ☒ 4. $32\sqrt{3}$ cm

Question ID : 630680384877
Option 1 ID : 6306801500395
Option 2 ID : 6306801500396
Option 3 ID : 6306801500397
Option 4 ID : 6306801500394
Status : Answered
Chosen Option : 4

Q.16 A, B, and C working separately can do a piece of work in 12, 10, and 15 days respectively. If they work for a day alternately, A beginning, in how many days, the work will be completed?

- Ans
- ☒ 1. 15 days
 - ☒ 2. 9 days
 - ☒ 3. 7 days
 - ☒ 4. 12 days

Question ID : 630680384940
Option 1 ID : 6306801500647
Option 2 ID : 6306801500649
Option 3 ID : 6306801500648
Option 4 ID : 6306801500646
Status : Answered
Chosen Option : 4

Q.17 The given table shows the number of goats, cows and buffaloes in five different farms. Find the average number of goats.

Farms	Number of Goats	Number of Cows	Number of Buffaloes
A	226	98	204
B	232	87	222
C	134	65	200
D	165	104	250
E	188	99	240

- Ans
- ☒ 1. 189
 - ☒ 2. 204
 - ☒ 3. 188
 - ☒ 4. 140

Question ID : 630680384872
Option 1 ID : 6306801500377
Option 2 ID : 6306801500376
Option 3 ID : 6306801500375
Option 4 ID : 6306801500374
Status : Answered
Chosen Option : 1

Q.18 In an election, there are two candidates. A got 44% of the votes and he lost by 2040 votes. Find the total number of votes.

- Ans**
- ☒ 1. 21,000
 - ☒ 2. 20,000
 - ☒ 3. 17,000
 - ☒ 4. 15,000

Question ID : 630680384902
Option 1 ID : 6306801500496
Option 2 ID : 6306801500497
Option 3 ID : 6306801500495
Option 4 ID : 6306801500494
Status : Answered
Chosen Option : 3

Q.19 A man sold an article at a gain of 15%. Had he sold it for ₹422 more, he would have gained 17%. Find the cost price of the article.

- Ans**
- ☒ 1. ₹ 21,400
 - ☒ 2. ₹ 21,100
 - ☒ 3. ₹ 24,100
 - ☒ 4. ₹ 24,500

Question ID : 630680384924
Option 1 ID : 6306801500582
Option 2 ID : 6306801500585
Option 3 ID : 6306801500584
Option 4 ID : 6306801500583
Status : Answered
Chosen Option : 2

Q.20 The number of sides of a regular polygon named 'A' is equal to $(s-1)$ and the number of sides of a regular polygon named 'B' is equal to $(s-2)$. The difference in their exterior angle is 6° . Find the value of s .

- Ans**
- ☒ 1. 11
 - ☒ 2. 17
 - ☒ 3. 15
 - ☒ 4. 13

Question ID : 630680385016
Option 1 ID : 6306801500950
Option 2 ID : 6306801500953
Option 3 ID : 6306801500952
Option 4 ID : 6306801500951
Status : Answered
Chosen Option : 4

Q.21 The average of 19 numbers is 32.50. If five numbers of average X are added to them, the average of all the numbers increases by 2.
Find the value of X.

- Ans**
- ☒ 1. 44.2
 - ☒ 2. 45.3
 - ☒ 3. 42.1
 - ☒ 4. 40.5

Question ID : 630680384864
Option 1 ID : 6306801500342
Option 2 ID : 6306801500344
Option 3 ID : 6306801500343
Option 4 ID : 6306801500345
Status : Answered
Chosen Option : 3

Q.22 If a pipe fills a tank in 17 hours, then what part of the tank will the pipe fill in 300 minutes?

- Ans**
- ☒ 1. $\frac{3}{17}$
 - ☒ 2. $\frac{5}{17}$
 - ☒ 3. $\frac{2}{15}$
 - ☒ 4. $\frac{6}{17}$

Question ID : 630680384937
Option 1 ID : 6306801500637
Option 2 ID : 6306801500634
Option 3 ID : 6306801500635
Option 4 ID : 6306801500636
Status : Answered
Chosen Option : 2

Q.23 If the value of $(a) + \left(\frac{1}{a}\right) = 7$, then find the value of $(a^3) + \left(\frac{1}{a^3}\right)$.

- Ans**
- ☒ 1. 320
 - ☒ 2. 322
 - ☒ 3. 325
 - ☒ 4. 321

Question ID : 630680384858
Option 1 ID : 6306801500319
Option 2 ID : 6306801500321
Option 3 ID : 6306801500320
Option 4 ID : 6306801500318
Status : Answered
Chosen Option : 2

Q.24 If two lines which are parallel are intersected by a transversal then the pair of alternate interior angles will be:

- Ans**
- ☒ 1. Not equal
 - ☒ 2. Supplementary
 - ☒ 3. Complementary
 - ☒ 4. Equal

Question ID : 630680384913
Option 1 ID : 6306801500541
Option 2 ID : 6306801500540
Option 3 ID : 6306801500539
Option 4 ID : 6306801500538
Status : Answered
Chosen Option : 4

Q.25 How many copper rods, each of length 14 m and diameter 10 cm can be made out of 1.65 cubic metre of copper. (Take $\pi = \frac{22}{7}$)

- Ans**
- ☒ 1. 15
 - ☒ 2. 9
 - ☒ 3. 5
 - ☒ 4. 23

Question ID : 630680384986
Option 1 ID : 6306801500832
Option 2 ID : 6306801500831
Option 3 ID : 6306801500830
Option 4 ID : 6306801500833
Status : Answered
Chosen Option : 1

Section : English Comprehension

Q.1 Select the word from the options which is exactly opposite in meaning to the bracketed word given in the sentence below.
April is often windy and (muddy) in Maine, but May and June are lambs.

- Ans**
- ☒ 1. confuse
 - ☒ 2. vivacious
 - ☒ 3. perplexity
 - ☒ 4. concur

Question ID : 630680385409
Option 1 ID : 6306801502466
Option 2 ID : 6306801502469
Option 3 ID : 6306801502467
Option 4 ID : 6306801502468
Status : Answered
Chosen Option : 2

Q.2 Select the word segment that substitutes the bracketed segment correctly and completes the sentence meaningfully.
He handled the situation [careless], causing further complications.

- Ans** ☒ 1. carelessly
 ☒ 2. no correction required
 ☒ 3. carelessness
 ☒ 4. careless

Question ID : 630680385286
Option 1 ID : 6306801502011
Option 2 ID : 6306801502013
Option 3 ID : 6306801502012
Option 4 ID : 6306801502010
Status : Answered
Chosen Option : 1

Q.3 Which of the following words is an antonym of "swift"?

- Ans** ☒ 1. Slow
 ☒ 2. Rapid
 ☒ 3. Silo
 ☒ 4. Quick

Question ID : 630680385305
Option 1 ID : 6306801502087
Option 2 ID : 6306801502088
Option 3 ID : 6306801502089
Option 4 ID : 6306801502086
Status : Answered
Chosen Option : 1

Q.4 Identify the one-word substitution in the following sentence:
What is the term for "a person who speaks more than one language fluently"?

- Ans** ☒ 1. Multilingual
 ☒ 2. Polyglot
 ☒ 3. Linguist
 ☒ 4. Bilingual

Question ID : 630680385291
Option 1 ID : 6306801502031
Option 2 ID : 6306801502032
Option 3 ID : 6306801502033
Option 4 ID : 6306801502030
Status : Answered
Chosen Option : 2

Q.5 Identify the one-word substitution in the following sentence:
What is the term for "a person who pretends to be someone they are not in order to deceive others"?

- Ans
- ☒ 1. Deceiver
 - ☒ 2. Fraud
 - ☒ 3. Imposter
 - ☒ 4. Swindler

Question ID : 630680385285
Option 1 ID : 6306801502008
Option 2 ID : 6306801502007
Option 3 ID : 6306801502006
Option 4 ID : 6306801502009
Status : Answered
Chosen Option : 3

Q.6 Based on the situation given below choose the appropriate idiom from the given options:
John had been procrastinating on his assignment for weeks, and the deadline was fast approaching. He finally realized that he needed to start working on it seriously to complete it on time. However, he found it challenging to concentrate, and every time he sat down to work, he would get distracted by his phone, social media, or random thoughts.
In this situation, which idiom best describes John's struggle to stay focused and avoid distractions?

- Ans
- ☒ 1. Monkey on his back
 - ☒ 2. A piece of cake
 - ☒ 3. Spill the beans
 - ☒ 4. Burn bridges

Question ID : 630680385730
Option 1 ID : 6306801503653
Option 2 ID : 6306801503652
Option 3 ID : 6306801503651
Option 4 ID : 6306801503650
Status : Answered
Chosen Option : 1



Comprehension:

Based on the following cloze passage answer the question given below:

Effective communication is essential for building strong relationships and achieving success in various aspects of life. It involves the exchange of ideas, thoughts, and information between individuals or groups. Good communication skills can (1) _____ understanding, resolve conflicts, and foster collaboration.

In order to communicate effectively, it is important to listen actively and (2) _____ to others' perspectives. This helps in gaining insights and promoting open dialogue. Additionally, using appropriate body language, tone of voice, and (3) _____ can enhance the clarity and impact of our messages.

SubQuestion No : 7

Q.7 Fill in the blank (2) with the appropriate word from the options below:

- Ans ☒ 1. empathize
 ☐ 2. respond
 ☐ 3. adapt
 ☐ 4. convey

Question ID : 630680385265
Option 1 ID : 6306801501940
Option 2 ID : 6306801501939
Option 3 ID : 6306801501938
Option 4 ID : 6306801501941
Status : Answered
Chosen Option : 2

Comprehension:

Based on the following cloze passage answer the question given below:

Effective communication is essential for building strong relationships and achieving success in various aspects of life. It involves the exchange of ideas, thoughts, and information between individuals or groups. Good communication skills can (1) _____ understanding, resolve conflicts, and foster collaboration.

In order to communicate effectively, it is important to listen actively and (2) _____ to others' perspectives. This helps in gaining insights and promoting open dialogue. Additionally, using appropriate body language, tone of voice, and (3) _____ can enhance the clarity and impact of our messages.

SubQuestion No : 8

Q.8 Fill in the blank (3) with the appropriate word from the options below:

- Ans ☐ 1. gestures
 ☐ 2. expressions
 ☐ 3. postures
 ☒ 4. words

Question ID : 630680385266
Option 1 ID : 6306801501942
Option 2 ID : 6306801501943
Option 3 ID : 6306801501945
Option 4 ID : 6306801501944
Status : Answered
Chosen Option : 1

Comprehension:

Based on the following cloze passage answer the question given below:

Effective communication is essential for building strong relationships and achieving success in various aspects of life. It involves the exchange of ideas, thoughts, and information between individuals or groups. Good communication skills can (1) _____ understanding, resolve conflicts, and foster collaboration.

In order to communicate effectively, it is important to listen actively and (2) _____ to others' perspectives. This helps in gaining insights and promoting open dialogue. Additionally, using appropriate body language, tone of voice, and (3) _____ can enhance the clarity and impact of our messages.

SubQuestion No : 9

Q.9 Fill in the blank (1) with the appropriate word from the options below:

- Ans ☒ 1. expedite
☒ 2. facilitate
☒ 3. hinder
☒ 4. impede

Question ID : 630680385264
Option 1 ID : 6306801501937
Option 2 ID : 6306801501934
Option 3 ID : 6306801501935
Option 4 ID : 6306801501936
Status : Answered
Chosen Option : 1

Comprehension:

Read the passage carefully and choose the best answer to each question out of the four alternatives

Technology has transformed the way we live and interact with the world. From the invention of the wheel to the advancements in artificial intelligence, technology continues to shape and influence our society. While it has brought numerous benefits and conveniences, it also presents challenges and implications that need to be carefully considered.

SubQuestion No : 10

Q.10 Which inference can be drawn from the passage?

- Ans ☒ 1. Technological advancements have no impact on our daily lives
☒ 2. Society should be cautious about the implications of technology
☒ 3. The development of technology is stagnant and unimportant
☒ 4. Technology has only brought positive changes to society

Question ID : 630680385324
Option 1 ID : 6306801502155
Option 2 ID : 6306801502156
Option 3 ID : 6306801502157
Option 4 ID : 6306801502154
Status : Answered
Chosen Option : 2

Comprehension:

Read the passage carefully and choose the best answer to each question out of the four alternatives

Technology has transformed the way we live and interact with the world. From the invention of the wheel to the advancements in artificial intelligence, technology continues to shape and influence our society. While it has brought numerous benefits and conveniences, it also presents challenges and implications that need to be carefully considered.

SubQuestion No : 11

Q.11 How does the passage connect to the world?

- Ans
- ☒ 1. By analysing the impact of technology on job markets
 - ☒ 2. By exploring the historical development of technology
 - ☒ 3. By discussing the global adoption of digital devices
 - ☒ 4. By examining the ethical dilemmas of artificial intelligence

Question ID : 630680385322
Option 1 ID : 6306801502148
Option 2 ID : 6306801502149
Option 3 ID : 6306801502146
Option 4 ID : 6306801502147
Status : Answered
Chosen Option : 3

Comprehension:

Read the passage carefully and choose the best answer to each question out of the four alternatives

Technology has transformed the way we live and interact with the world. From the invention of the wheel to the advancements in artificial intelligence, technology continues to shape and influence our society. While it has brought numerous benefits and conveniences, it also presents challenges and implications that need to be carefully considered.

SubQuestion No : 12

Q.12 Which title best represents the passage?

- Ans
- ☒ 1. The Benefits of Technological Advancements
 - ☒ 2. The devolution of technology
 - ☒ 3. The Negative Effects of Technological Innovation
 - ☒ 4. The Impact of Technology on Society

Question ID : 630680385321
Option 1 ID : 6306801502143
Option 2 ID : 6306801502142
Option 3 ID : 6306801502144
Option 4 ID : 6306801502145
Status : Answered
Chosen Option : 4

Comprehension:

Read the passage carefully and choose the best answer to each question out of the four alternatives

Technology has transformed the way we live and interact with the world. From the invention of the wheel to the advancements in artificial intelligence, technology continues to shape and influence our society. While it has brought numerous benefits and conveniences, it also presents challenges and implications that need to be carefully considered.

SubQuestion No : 13

Q.13 What is the tone of the passage?

- Ans ☒ 1. Optimistic and enthusiastic
☒ 2. Critical and cautionary
☒ 3. Pessimistic and dismissive
☒ 4. Partial and informative

Question ID : 630680385323
Option 1 ID : 6306801502151
Option 2 ID : 6306801502152
Option 3 ID : 6306801502153
Option 4 ID : 6306801502150
Status : Answered
Chosen Option : 2

Q.14 Use negative question tag for statement given below:
"They can swim well, _____?"

- Ans ☒ 1. do they?
☒ 2. can they?
☒ 3. can't it?
☒ 4. can't they?

Question ID : 630680385459
Option 1 ID : 6306801502652
Option 2 ID : 6306801502651
Option 3 ID : 6306801502653
Option 4 ID : 6306801502650
Status : Answered
Chosen Option : 4

Q.15 Arrange the following sentences in the correct order to form a coherent paragraph.
A)The sun dipped below the horizon, painting the sky in hues of orange and pink.
B)They set up a cozy picnic spot, complete with a blanket and a basket of delicious treats.
C)The couple enjoyed the serenity of the beach, the sound of crashing waves providing a soothing backdrop.
D)Hand in hand, they strolled along the shore, leaving footprints in the soft sand.
E)It was a perfect evening, filled with love and the beauty of nature.

- Ans ☒ 1. DABEC
☒ 2. ACDBE
☒ 3. ACEDB
☒ 4. ABDCE

Question ID : 630680385255
Option 1 ID : 6306801501908
Option 2 ID : 6306801501906
Option 3 ID : 6306801501909
Option 4 ID : 6306801501907
Status : Answered
Chosen Option : 2

Q.16 Which of the following is a synonym for the word "Ineffable"?

Ans ☒ 1. Unutterable

☐ 2. Mundane

☐ 3. Perfunctory

☐ 4. Ephemeral

Question ID : 630680385744

Option 1 ID : 6306801503707

Option 2 ID : 6306801503708

Option 3 ID : 6306801503709

Option 4 ID : 6306801503706

Status : Not Answered

Chosen Option : --

Q.17 Select the word segment that substitutes the bracketed word segment correctly and completes the sentence meaningfully.

The new employee was [nervously], trying to make a good impression on their first day.

Ans ☐ 1. no correction required

☐ 2. diligently

☐ 3. boldly

☒ 4. anxiously

Question ID : 630680385280

Option 1 ID : 6306801501989

Option 2 ID : 6306801501988

Option 3 ID : 6306801501987

Option 4 ID : 6306801501986

Status : Answered

Chosen Option : 4

Q.18 Arrange the following sentences in the correct order to form a coherent paragraph.

A) He spent hours meticulously planning every detail of his upcoming trip.

B) The adventure awaited him with a promise of new experiences and unforgettable memories.

C) As he boarded the plane, excitement and anticipation coursed through his veins.

D) Exploring the vibrant markets, trying local cuisine, and immersing himself in the culture filled him with joy.

E) He stepped foot in the foreign land, ready to embrace the journey that lay ahead.

Ans ☐ 1. CEDBA

☐ 2. ADBCE

☒ 3. ACEDB

☐ 4. BDACE

Question ID : 630680385249

Option 1 ID : 6306801501884

Option 2 ID : 6306801501883

Option 3 ID : 6306801501882

Option 4 ID : 6306801501885

Status : Answered

Chosen Option : 1

Q.19 Identify the synonym for the bracketed word in the sentence:
The [serendipitous] encounter led to a fortuitous business opportunity.

- Ans ☒ 1. fortuitous
☒ 2. accidental
☒ 3. incidental
☒ 4. premeditated

Question ID : 630680385745
Option 1 ID : 6306801503712
Option 2 ID : 6306801503710
Option 3 ID : 6306801503713
Option 4 ID : 6306801503711
Status : Answered
Chosen Option : 2

Q.20 Select the most appropriate missing sentence to complete the following paragraph:
The chef prepared a gourmet feast for the guests, carefully crafting each dish with precision. The aromas wafted through the air, tempting everyone's taste buds. As the guests took their first bites, _____.

- Ans ☒ 1. the sound of fireworks erupted nearby, adding to the festive ambiance.
☒ 2. a waiter accidentally spilled a tray of drinks, causing a momentary distraction.
☒ 3. the guests couldn't help but compliment the chef's culinary skills.
☒ 4. the chef emerged from the kitchen, personally greeting each guest.

Question ID : 630680385250
Option 1 ID : 6306801501887
Option 2 ID : 6306801501886
Option 3 ID : 6306801501889
Option 4 ID : 6306801501888
Status : Answered
Chosen Option : 3

Q.21 Fill in the blank with the most appropriate phrasal verb:
Tom didn't have much time to pack for his trip, so he had to quickly _____ his clothes into the suitcase.

- Ans ☒ 1. sort out
☒ 2. cram in
☒ 3. put away
☒ 4. throw away

Question ID : 630680385685
Option 1 ID : 6306801503482
Option 2 ID : 6306801503485
Option 3 ID : 6306801503483
Option 4 ID : 6306801503484
Status : Answered
Chosen Option : 3

Q.22 Select the most appropriate missing sentence to complete the following paragraph:
The engineer meticulously designed the bridge, ensuring its structural integrity and safety. Construction was underway, and workers diligently carried out their tasks. Suddenly, a _____.

- Ans** ☒ 1. new safety regulation was issued, requiring additional inspections.
 ☒ 2. news crew arrived to document the progress of the engineering project.
 ☒ 3. group of local residents protested against the bridge construction.
 ☒ 4. heavy rain shower passed, causing a temporary delay in construction.

Question ID : 630680385256
Option 1 ID : 6306801501913
Option 2 ID : 6306801501912
Option 3 ID : 6306801501911
Option 4 ID : 6306801501910
Status : Answered
Chosen Option : 4

Q.23 Fill in the blank with the appropriate adverb:
She spoke _____ during the interview, answering every question with confidence and clarity.

- Ans** ☒ 1. eloquently
 ☒ 2. loudly
 ☒ 3. silently
 ☒ 4. gently

Question ID : 630680385448
Option 1 ID : 6306801502609
Option 2 ID : 6306801502607
Option 3 ID : 6306801502606
Option 4 ID : 6306801502608
Status : Answered
Chosen Option : 1

Q.24 Based on the situation given below choose the appropriate idiom from the given options:
In a small village, two neighbouring families, the Smiths and the Browns, had been friends for generations. However, a misunderstanding occurred between their children during a local festival, leading to a heated argument. The elders of both families decided to intervene and resolve the dispute.
Which proverb best reflects the approach taken by the elders to resolve the misunderstanding between the Smiths and the Browns?

- Ans** ☒ 1. A bird in the hand is worth two in the bush
 ☒ 2. Don't count your chickens before they hatch
 ☒ 3. Don't make a mountain out of a molehill
 ☒ 4. Too many cooks spoil the broth

Question ID : 630680385733
Option 1 ID : 6306801503662
Option 2 ID : 6306801503663
Option 3 ID : 6306801503664
Option 4 ID : 6306801503665
Status : Answered
Chosen Option : 3

Q.25 Select the missing sentence that would logically fill in the blank:
Globalization refers to the increased interconnectedness and interdependence of countries worldwide. It involves the exchange of goods, services, ideas, and cultures across borders, facilitated by advances in transportation and communication. Globalization has both positive and negative impacts on economies, societies, and the environment. _____.

- Ans**
- ☒ 1. Many people enjoy international cuisine due to globalization.
 - ☒ 2. The United Nations promotes global cooperation and peace.
 - ☒ 3. Some countries have imposed tariffs to protect their local industries as this is seen one of the major challenges with globalization.
 - ☒ 4. Multinational corporations have headquarters in different countries.

Question ID : **630680385701**

Option 1 ID : **6306801503546**

Option 2 ID : **6306801503547**

Option 3 ID : **6306801503549**

Option 4 ID : **6306801503548**

Status : **Answered**

Chosen Option : **3**

