



# Teachingninja.in



**Latest Govt Job updates**



**Private Job updates**



**Free Mock tests available**



**Visit - [teachingninja.in](https://teachingninja.in)**

# DDA ASO

**Previous Year Paper**  
**25 Sept, 2023 Shift 3**





**DELHI DEVELOPMENT AUTHORITY**  
**RECRUITMENT CELL**  
**VIKAS SADAN, INA, NEW DELHI - 110023**  
(<https://www.dda.gov.in>)

Advertisement No. 02/2023/Recrtt. Cell/Pers./DDA

Test Date	25/09/2023
Test Time	2:30 PM - 3:30 PM
Subject	Assistant Section Officer (ASO)

Section : General Intelligence and Reasoning

Q.1 Which of the following numbers will replace the question mark (?) in the given series?

75, ?, 165, 125, 625, 565

- Ans
- ☒ 1. 85
  - ☒ 2. 65
  - ☒ 3. 45
  - ☒ 4. 55

Question ID : 630680384700

Option 1 ID : 6306801499688

Option 2 ID : 6306801499689

Option 3 ID : 6306801499687

Option 4 ID : 6306801499686

Status : Not Attempted and  
Marked For Review

Chosen Option : --

Q.2 In the following letter series some of the letters are missing which are given in that order as one of the alternatives below it. Select the correct alternative.

b a a \_ b b \_ a \_ \_ b b \_ a a b \_

- Ans
- ☒ 1. abbaab
  - ☒ 2. abaaba
  - ☒ 3. ababab
  - ☒ 4. abaabb

Question ID : 630680386211

Option 1 ID : 6306801505555

Option 2 ID : 6306801505556

Option 3 ID : 6306801505557

Option 4 ID : 6306801505554

Status : Answered

Chosen Option : 4

Q.3 How many letters are there in the given series that are immediately preceded by a vowel and immediately followed by a symbol?  
X @ T J # E S J I M ! Q @ A L ^ M + O F & D W

- Ans ☒ 1. 3  
☐ 2. 4  
☐ 3. 1  
☐ 4. 2

Question ID : 630680384652  
Option 1 ID : 6306801499495  
Option 2 ID : 6306801499497  
Option 3 ID : 6306801499494  
Option 4 ID : 6306801499496  
Status : Answered  
Chosen Option : 1

Q.4 If the position of first and the third digits within each number are interchanged, which of the following will be the last digit of the third highest number?  
9324 4532 7534 6535

- Ans ☐ 1. 4  
☒ 2. 2  
☐ 3. 6  
☐ 4. 5

Question ID : 630680384750  
Option 1 ID : 6306801499886  
Option 2 ID : 6306801499887  
Option 3 ID : 6306801499889  
Option 4 ID : 6306801499888  
Status : Not Answered  
Chosen Option : --

Q.5 A is the sister of B. C is brother of B. D is the mother of A. How is B related to D?

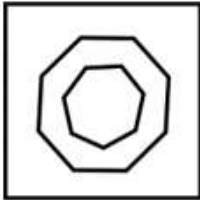
- Ans ☒ 1. Son or Daughter  
☐ 2. Husband  
☐ 3. Data inadequate  
☐ 4. Son

Question ID : 630680384771  
Option 1 ID : 6306801499972  
Option 2 ID : 6306801499971  
Option 3 ID : 6306801499973  
Option 4 ID : 6306801499970  
Status : Answered  
Chosen Option : 1

Q.6 Choose the figure which is different from the rest.

Ans

✗ 1.




✗ 2.



✗ 3.



✓ 4.



Question ID : 630680384741

Option 1 ID : 6306801499850

Option 2 ID : 6306801499852

Option 3 ID : 6306801499853

Option 4 ID : 6306801499851

Status : Answered

Chosen Option : 4

Q.7 Which of the following letter will replace the question mark (?) in the given series?

W, Q, L, H, E, ?

Ans

✓ 1. C

✗ 2. D

✗ 3. A

✗ 4. B

Question ID : 630680384719

Option 1 ID : 6306801499764

Option 2 ID : 6306801499765

Option 3 ID : 6306801499762

Option 4 ID : 6306801499763

Status : Answered

Chosen Option : 1

**Q.8** Select the option that is related to the third word in the same way as the second word is related to the first word.  
GROVE : FOREST :: CHUBBY : ?

- Ans**
- ☒ 1. SLIM
  - ☒ 2. SWEET
  - ☒ 3. OBESE
  - ☒ 4. CUTE

Question ID : 630680384493  
Option 1 ID : 6306801498861  
Option 2 ID : 6306801498859  
Option 3 ID : 6306801498860  
Option 4 ID : 6306801498858  
Status : Answered  
Chosen Option : 3

**Q.9** In a certain code, 'ton lon gon' means 'Boys and Girls', 'hon pos lon' means 'Boys are strong', and 'mon pos gon' means 'Girls are Pretty'. What is the code of Pretty?

- Ans**
- ☒ 1. pos
  - ☒ 2. hon
  - ☒ 3. mon
  - ☒ 4. gon

Question ID : 630680384481  
Option 1 ID : 6306801498810  
Option 2 ID : 6306801498813  
Option 3 ID : 6306801498812  
Option 4 ID : 6306801498811  
Status : Answered  
Chosen Option : 3

**Q.10** In the following question, a statement is given followed by two courses of action numbered I and II. Identify and answer which course(s) of action logically follows.

Statement: In a rural community, there have been reports of an increase in the number of people experiencing health issues, particularly related to respiratory problems, over the past few months.

Courses of Action:

I. The Government should promptly dispatch a team of qualified healthcare professionals to offer medical assistance to the affected individuals.

II. Establish a designated ward to isolate and provide appropriate medical treatment to those suffering from respiratory illnesses.

- Ans**
- ☒ 1. Both I and II follows
  - ☒ 2. Only I follows
  - ☒ 3. Neither I nor II follows
  - ☒ 4. Only II follows

Question ID : 630680386181  
Option 1 ID : 6306801505436  
Option 2 ID : 6306801505434  
Option 3 ID : 6306801505437  
Option 4 ID : 6306801505435  
Status : Answered  
Chosen Option : 1

Q.11 Find the wrong number in the series:

24, 26, 48, 270, 2494, 24714

Ans ☒ 1. 24714

☒ 2. 2494

☒ 3. 270

☒ 4. 48

Question ID : 630680384562

Option 1 ID : 6306801499135

Option 2 ID : 6306801499137

Option 3 ID : 6306801499136

Option 4 ID : 6306801499134

Status : Not Attempted and  
Marked For Review

Chosen Option : --

Q.12 In the following question three statements are given, followed by two conclusions numbered I and II. Assume three given statements to be true even if they seem to be at variance with commonly known facts and then decide which of the given conclusion logically follows from the two statements disregarding commonly known facts.

Statements:

I. No dogs are cats

II. Mostly cats are rats

III. Only a few rats are tigers

Conclusions:

I. Some cats are not tigers

II. All rats being dogs is a possibility.

Ans ☒ 1. Only conclusion II follows

☒ 2. Neither conclusion I nor II follows

☒ 3. Both conclusions I and II follow

☒ 4. Only conclusion I follows

Question ID : 630680386219

Option 1 ID : 6306801505587

Option 2 ID : 6306801505589

Option 3 ID : 6306801505588

Option 4 ID : 6306801505586

Status : Answered

Chosen Option : 2

Q.13 Four different positions of the same dice are given below. Find the letter opposite of e.



Ans ☒ 1. f

☒ 2. c

☒ 3. a

☒ 4. b

Question ID : 630680384536

Option 1 ID : 6306801499030

Option 2 ID : 6306801499031

Option 3 ID : 6306801499033

Option 4 ID : 6306801499032

Status : Answered

Chosen Option : 3

Q.14 Select the odd number in the following number series:

12, 24, 36, 45, 60, 72

Ans ☒ 1. 72

☒ 2. 24

☒ 3. 45

☒ 4. 60

Question ID : 630680384461

Option 1 ID : 6306801498732

Option 2 ID : 6306801498733

Option 3 ID : 6306801498730

Option 4 ID : 6306801498731

Status : Answered

Chosen Option : 3

Q.15 Find the wrong number in the series:

10, 22, 58, 119, 202, 310

Ans ☒ 1. 119

☒ 2. 310

☒ 3. 202

☒ 4. 58

Question ID : 630680384765

Option 1 ID : 6306801499949

Option 2 ID : 6306801499946

Option 3 ID : 6306801499947

Option 4 ID : 6306801499948

Status : Answered

Chosen Option : 1

Q.16 In a certain code language, if Gym is called Library, Library is called Cafe, Cafe is called Park, Park is called Canteen, then where are the trees planted?

Ans ☒ 1. Cafe

☒ 2. Library

☒ 3. Park

☒ 4. Canteen

Question ID : 630680384479

Option 1 ID : 6306801498802

Option 2 ID : 6306801498804

Option 3 ID : 6306801498803

Option 4 ID : 6306801498805

Status : Answered

Chosen Option : 4



**Q.17** Select the option that is related to the third number-letter cluster in the same way as the second number-letter cluster is related to the first number-letter cluster.  
MAD : LNZBCE :: KEY : ?

- Ans**
- ☒ 1. KFZDLY
  - ☒ 2. JLFDXZ
  - ☒ 3. JLDFXZ
  - ☒ 4. JKDEXY

Question ID : 630680384494  
Option 1 ID : 6306801498865  
Option 2 ID : 6306801498864  
Option 3 ID : 6306801498863  
Option 4 ID : 6306801498862  
Status : Answered  
Chosen Option : 3

**Q.18** Five friends A, Z, B, Y and X sit around a circular table facing each other. A sits to the immediate left of Z. B sits to the immediate right of X. Y is not a neighbour of Z. Who sits to the immediate right of B?

- Ans**
- ☒ 1. A
  - ☒ 2. Z
  - ☒ 3. Y
  - ☒ 4. X

Question ID : 630680384518  
Option 1 ID : 6306801498960  
Option 2 ID : 6306801498958  
Option 3 ID : 6306801498959  
Option 4 ID : 6306801498961  
Status : Answered  
Chosen Option : 3

**Q.19** Three Statements are given followed by two conclusions numbered I and II. Assuming the statements to be true, even if they seem to be at variance with commonly known facts, decide which of the conclusions logically follow(s) from the statements.

Statement:  
Statement I: No mango is an apple.  
Statement II: No apple is a guava.  
Statement III: No guava is a banana.  
Conclusion:  
Conclusion I: No mango is a banana.  
Conclusion II: Some mangoes are bananas.

- Ans**
- ☒ 1. Neither conclusion I nor II follows
  - ☒ 2. Only conclusion II follows
  - ☒ 3. Either conclusions I or II follow
  - ☒ 4. Only conclusion I follows

Question ID : 630680384728  
Option 1 ID : 6306801499801  
Option 2 ID : 6306801499799  
Option 3 ID : 6306801499800  
Option 4 ID : 6306801499798  
Status : Answered  
Chosen Option : 3

Q.20 Arrange the given words in the alphabetical order.

1. DREAM
2. DELIGHT
3. DENGUE
4. DELUSIONAL
5. DRAMA

Ans ☒ 1. 23451  
☒ 2. 23415  
☒ 3. 24315  
☒ 4. 24351

Question ID : 630680384456  
Option 1 ID : 6306801498712  
Option 2 ID : 6306801498713  
Option 3 ID : 6306801498710  
Option 4 ID : 6306801498711  
Status : Answered  
Chosen Option : 1

Q.21 A wildlife conservation center is organizing a week-long workshop for experts in seven different areas of expertise - Rainforest Ecology, Marine Biology, Ornithology, Botany, Herpetology, Environmental Policy, and Conservation Engineering from 15th September to 22nd September.

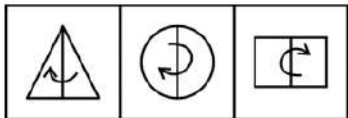
- (i) The workshop should start with Botany.
- (ii) 16th September, being Sunday, should be a day of rest for the participants.
- (iii) Herpetology should be scheduled on the day following Marine Biology.
- (iv) The Conservation Engineering session should be on the day of the workshop's closing day.
- (v) Ornithology should be immediately after the day of rest.
- (vi) There should be a gap of one day between Environmental Policy and Conservation Engineering.

Which workshop will be on Tuesday ?

Ans ☒ 1. Herpetology  
☒ 2. Environmental Policy  
☒ 3. Rainforest Ecology  
☒ 4. Marine Biology

Question ID : 630680386202  
Option 1 ID : 6306801505518  
Option 2 ID : 6306801505521  
Option 3 ID : 6306801505520  
Option 4 ID : 6306801505519  
Status : Not Attempted and Marked For Review  
Chosen Option : --

**Q.22** The figures in the question are similar in certain manner. Select a figure from the options which possess the same common feature as in the question figures.




**Ans**

✗ 1.




✗ 2.



✓ 3.



✗ 4.



Question ID : 630680386227

Option 1 ID : 6306801505621

Option 2 ID : 6306801505619

Option 3 ID : 6306801505618

Option 4 ID : 6306801505620

Status : Not Attempted and Marked For Review

Chosen Option : --

**Q.23** Four word pairs have been given, out of which three are alike in some manner and one is different. Select the odd word pair.

**Ans**

✗ 1. ENORMOUS : BIG

✗ 2. CROOKED : TWISTED

✗ 3. SILENCE : PEACE

✓ 4. WAIL : PRAISE

Question ID : 630680384704

Option 1 ID : 6306801499703

Option 2 ID : 6306801499705

Option 3 ID : 6306801499702

Option 4 ID : 6306801499704

Status : Answered

Chosen Option : 4

Q.24 If 'A × B' means 'A is the father of B'.  
If 'A + B' means 'A is the mother of B'.  
If 'A ÷ B' means 'A is the sister of B'.  
If 'A - B' means 'A is the brother of B'.  
How is X related to Y in the expression 'X ÷ T + Z - Y'?

- Ans
- ☒ 1. Sister
  - ☒ 2. Mother
  - ☒ 3. Mother's sister
  - ☒ 4. Father's sister

Question ID : 630680384667  
Option 1 ID : 6306801499554  
Option 2 ID : 6306801499555  
Option 3 ID : 6306801499556  
Option 4 ID : 6306801499557  
Status : Answered  
Chosen Option : 3

Q.25 Four letter-clusters pairs have been given, out of which three are alike in some manner and one is different. Select the odd letter-cluster pair.

- Ans
- ☒ 1. TU : VX
  - ☒ 2. EG : GJ
  - ☒ 3. AC : CE
  - ☒ 4. IJ : KM

Question ID : 630680384708  
Option 1 ID : 6306801499721  
Option 2 ID : 6306801499720  
Option 3 ID : 6306801499719  
Option 4 ID : 6306801499718  
Status : Answered  
Chosen Option : 3

Section : General Awareness

Q.1 How many Tirthankaras are there in Jainism?

- Ans
- ☒ 1. 24
  - ☒ 2. 15
  - ☒ 3. 30
  - ☒ 4. 45

Question ID : 630680384110  
Option 1 ID : 6306801497331  
Option 2 ID : 6306801497330  
Option 3 ID : 6306801497332  
Option 4 ID : 6306801497333  
Status : Answered  
Chosen Option : 1

Q.2 The famous Hornbill Festival, celebrated in Nagaland, showcases the rich cultural heritage of which indigenous tribes?

- Ans
- ☒ 1. Bodos and Dimasa
  - ☒ 2. Naga tribes
  - ☒ 3. Mishing and Karbi
  - ☒ 4. Khasi and Garo

Question ID : 630680384167  
Option 1 ID : 6306801497559  
Option 2 ID : 6306801497560  
Option 3 ID : 6306801497561  
Option 4 ID : 6306801497558  
Status : Answered  
Chosen Option : 2

Q.3 Which of the following states of India has ruled that access to the Internet is a fundamental right which cannot be taken away arbitrarily?

- Ans
- ☒ 1. Kerala
  - ☒ 2. Punjab
  - ☒ 3. Assam
  - ☒ 4. New Delhi

Question ID : 630680384044  
Option 1 ID : 6306801497066  
Option 2 ID : 6306801497067  
Option 3 ID : 6306801497068  
Option 4 ID : 6306801497069  
Status : Answered  
Chosen Option : 1

Q.4 From the options below, which fellowship benefitting the minorities has been discontinued from 2023?

- Ans
- ☒ 1. Abdul Kalam Technology Innovation National Fellowship
  - ☒ 2. Tata Innovation Fellowship
  - ☒ 3. Azim Premji Foundation Fellowship
  - ☒ 4. Maulana Azad Fellowship

Question ID : 630680384150  
Option 1 ID : 6306801497492  
Option 2 ID : 6306801497490  
Option 3 ID : 6306801497491  
Option 4 ID : 6306801497493  
Status : Not Answered  
Chosen Option : --

Q.5 The 2022 National Games of India return after a gap of how many years?

- Ans
- ☒ 1. 3
  - ☒ 2. 5
  - ☒ 3. 7
  - ☒ 4. 2

Question ID : 630680384158  
Option 1 ID : 6306801497523  
Option 2 ID : 6306801497524  
Option 3 ID : 6306801497525  
Option 4 ID : 6306801497522  
Status : Answered  
Chosen Option : 4

Q.6 Which of the following is a limitation of the barter system?

- Ans ☒ 1. Lack of Double Coincidence of wants
- ☐ 2. Double Coincidence of wants
- ☐ 3. Store of value
- ☐ 4. Medium of exchange

Question ID : 630680384290  
Option 1 ID : 6306801498047  
Option 2 ID : 6306801498048  
Option 3 ID : 6306801498046  
Option 4 ID : 6306801498049  
Status : Answered  
Chosen Option : 2

Q.7 Under whose leadership did the Mughals invaded India?

- Ans ☐ 1. Muhammad Shah
- ☐ 2. Padshah Babur
- ☐ 3. Ghengis Khan
- ☒ 4. Zahir-ud-din Babur

Question ID : 630680384118  
Option 1 ID : 6306801497363  
Option 2 ID : 6306801497364  
Option 3 ID : 6306801497365  
Option 4 ID : 6306801497362  
Status : Answered  
Chosen Option : 4

Q.8 When is Independence Day celebrated in India?

- Ans ☐ 1. 26th January
- ☐ 2. 15th July
- ☐ 3. 30th January
- ☒ 4. 15th August

Question ID : 630680384073  
Option 1 ID : 6306801497184  
Option 2 ID : 6306801497185  
Option 3 ID : 6306801497183  
Option 4 ID : 6306801497182  
Status : Answered  
Chosen Option : 4

Q.9 Which river originates from the Gangotri Glacier in Uttarakhand and is considered sacred in Hinduism?

- Ans ☐ 1. Godavari River
- ☐ 2. Krishna River
- ☒ 3. Ganges River
- ☐ 4. Brahmaputra River

Question ID : 630680384422  
Option 1 ID : 6306801498577  
Option 2 ID : 6306801498576  
Option 3 ID : 6306801498575  
Option 4 ID : 6306801498574  
Status : Answered  
Chosen Option : 3

Q.10 Who was an iconic figure in the Indian freedom struggle, known as the "Iron Man of India"?

- Ans ☒ 1. Vallabhbhai Patel  
☐ 2. Lal Bahadur Shastri  
☐ 3. Subhash Chandra Bose  
☐ 4. Bhagat Singh

Question ID : 630680386489  
Option 1 ID : 6306801506666  
Option 2 ID : 6306801506669  
Option 3 ID : 6306801506667  
Option 4 ID : 6306801506668  
Status : Answered  
Chosen Option : 2

Q.11 Who among the following founded the Brahmo Sabha in 1828, which was later renamed as 'Brahma Samaj'?

- Ans ☐ 1. Swami Vivekananda  
☐ 2. Rabindranath Tagore  
☒ 3. Raja Rammohan Roy  
☐ 4. Dadoba Pandurang

Question ID : 630680384126  
Option 1 ID : 6306801497394  
Option 2 ID : 6306801497395  
Option 3 ID : 6306801497396  
Option 4 ID : 6306801497397  
Status : Not Answered  
Chosen Option : --

Q.12 When was the resolution of "Poorna Swaraj" passed in India?

- Ans ☐ 1. 1933  
☐ 2. 1936  
☒ 3. 1930  
☐ 4. 1929

Question ID : 630680384127  
Option 1 ID : 6306801497398  
Option 2 ID : 6306801497401  
Option 3 ID : 6306801497400  
Option 4 ID : 6306801497399  
Status : Not Answered  
Chosen Option : --

Q.13 What is the full form of SYST, scheme launched by Department of Science & Technology for young scientists ?

- Ans ☒ 1. Scheme for Young Scientists and Technologists  
☐ 2. Scheme for Young Scientists and Techy  
☐ 3. Scheme for Young Scientists and Techno Researchers  
☐ 4. Scheme for Youth Scientists and Technologists

Question ID : 630680386396  
Option 1 ID : 6306801506296  
Option 2 ID : 6306801506295  
Option 3 ID : 6306801506297  
Option 4 ID : 6306801506294  
Status : Not Answered  
Chosen Option : --

Q.14 Which of the following methods of measuring National Income is considered best in India?

- Ans
- ☒ 1. Production method
  - ☒ 2. Expenditure method
  - ☒ 3. Income method
  - ☒ 4. Keynesian theory

Question ID : 630680384079  
Option 1 ID : 6306801497208  
Option 2 ID : 6306801497207  
Option 3 ID : 6306801497206  
Option 4 ID : 6306801497209  
Status : Answered  
Chosen Option : 2

Q.15 Which among the following is one of the Kingdoms of South India during the medieval period 700AD-1857AD?

- Ans
- ☒ 1. Chera
  - ☒ 2. Satyavahana
  - ☒ 3. Chola
  - ☒ 4. Vijayanagara

Question ID : 630680384121  
Option 1 ID : 6306801497376  
Option 2 ID : 6306801497377  
Option 3 ID : 6306801497375  
Option 4 ID : 6306801497374  
Status : Not Answered  
Chosen Option : --

Q.16 Which of the following awards is given to those who have achieved literary merit and created new trends by publishing their works, prose or poetry in any of the 24 recognised languages?

- Ans
- ☒ 1. Bharat Ratna
  - ☒ 2. Sahitya Akademi Award
  - ☒ 3. Vyas Samman
  - ☒ 4. Dadasaheb Phalke Lifetime Achievement Award

Question ID : 630680384063  
Option 1 ID : 6306801497142  
Option 2 ID : 6306801497144  
Option 3 ID : 6306801497145  
Option 4 ID : 6306801497143  
Status : Answered  
Chosen Option : 2



Q.17 Who among the following persons from North East India wrote the autobiography "Unbreakable"?

- Ans
- ☐ 1. Chekrovolu Swuro
  - ☐ 2. Jayanta Talukdar
  - ☐ 3. Ankushita Boro
  - ☒ 4. Mary Kom

Question ID : 630680384062  
Option 1 ID : 6306801497140  
Option 2 ID : 6306801497138  
Option 3 ID : 6306801497141  
Option 4 ID : 6306801497139  
Status : Not Answered  
Chosen Option : --

Q.18 Which government initiative in India aims to provide electricity to all households in the country?

- Ans
- ☐ 1. Pradhan Mantri Jan Dhan Yojana
  - ☐ 2. Make in India
  - ☒ 3. Pradhan Mantri Sahaj Bijli Har Ghar Yojana
  - ☐ 4. Swachh Bharat Abhiyan

Question ID : 630680384413  
Option 1 ID : 6306801498540  
Option 2 ID : 6306801498539  
Option 3 ID : 6306801498541  
Option 4 ID : 6306801498538  
Status : Answered  
Chosen Option : 3

Q.19 "Gender Inequality Index" (GII) is another important index published by the United Nations Development Programme (UNDP). GII measures gender-based discrimination in which areas?

- Ans
- ☐ 1. Life expectancy, income, and education
  - ☐ 2. Literacy rate, employment, and political representation
  - ☒ 3. Reproductive Health, Empowerment and the Labour Market
  - ☐ 4. Poverty, food security, and sanitation

Question ID : 630680384198  
Option 1 ID : 6306801497684  
Option 2 ID : 6306801497683  
Option 3 ID : 6306801497682  
Option 4 ID : 6306801497685  
Status : Answered  
Chosen Option : 1

Q.20 Which of the following years is called the "Demographic Divide" in India?

- Ans ☒ 1. 1950  
☒ 2. 1921  
☒ 3. 1941  
☒ 4. 1951

Question ID : 630680384316  
Option 1 ID : 6306801498153  
Option 2 ID : 6306801498150  
Option 3 ID : 6306801498151  
Option 4 ID : 6306801498152  
Status : Not Answered  
Chosen Option : --

Q.21 Which language belongs to the Dravidian language family and is primarily spoken in the state of Karnataka in India?

- Ans ☒ 1. Malayalam  
☒ 2. Kannada  
☒ 3. Telugu  
☒ 4. Marathi

Question ID : 630680384405  
Option 1 ID : 6306801498509  
Option 2 ID : 6306801498508  
Option 3 ID : 6306801498506  
Option 4 ID : 6306801498507  
Status : Answered  
Chosen Option : 2

Q.22 Which project is aimed to improve the road network in the country?

- Ans ☒ 1. Golden Quadrilateral Project  
☒ 2. Sagarmala Project  
☒ 3. Bharatmala Project  
☒ 4. Dedicated Freight Corridor Project

Question ID : 630680384415  
Option 1 ID : 6306801498546  
Option 2 ID : 6306801498548  
Option 3 ID : 6306801498547  
Option 4 ID : 6306801498549  
Status : Answered  
Chosen Option : 2

Q.23 Who among the following players has set a record in the Guinness Book for achieving 200 international caps for Portugal?

- Ans ☒ 1. Pepe  
☒ 2. Bruno Fernandes  
☒ 3. Cristiano Ronaldo  
☒ 4. Luis Figo

Question ID : 630680384052  
Option 1 ID : 6306801497101  
Option 2 ID : 6306801497098  
Option 3 ID : 6306801497099  
Option 4 ID : 6306801497100  
Status : Not Answered  
Chosen Option : --

Q.24 Which of the following states of India has come up with the first-of-its-kind initiative of the latest robotics framework?

- Ans ☒ 1. Telangana  
☒ 2. Assam  
☒ 3. West Bengal  
☒ 4. Maharashtra

Question ID : 630680384035  
Option 1 ID : 6306801497030  
Option 2 ID : 6306801497033  
Option 3 ID : 6306801497032  
Option 4 ID : 6306801497031  
Status : Not Answered  
Chosen Option : --

Q.25 "The Indian Ocean Dipole" (IOD) is an important climate phenomenon that influences the monsoon rainfall in India. What does a "Positive IOD" indicate for India's monsoon?

- Ans ☒ 1. Normal monsoon rainfall  
☒ 2. Below-average monsoon rainfall  
☒ 3. Above-average monsoon rainfall  
☒ 4. No impact on monsoon rainfall

Question ID : 630680384206  
Option 1 ID : 6306801497715  
Option 2 ID : 6306801497714  
Option 3 ID : 6306801497717  
Option 4 ID : 6306801497716  
Status : Not Answered  
Chosen Option : --

Section : Quantitative Aptitude

Q.1 The population of a city is increased by 15% in 2021 and decreased by 3% in 2022. Find the overall changed percentage of the population.

- Ans ☒ 1. 16.7% increase  
☒ 2. 11.5% decrease  
☒ 3. 18.5% decrease  
☒ 4. 11.55% increase

Question ID : 630680384905  
Option 1 ID : 6306801500507  
Option 2 ID : 6306801500508  
Option 3 ID : 6306801500509  
Option 4 ID : 6306801500506  
Status : Answered  
Chosen Option : 4

Q.2 Find the value of  $\sin^2 48^\circ + \sin^2 42^\circ = ?$

- Ans
- ☐ 1. 0
  - ☐ 2. 2
  - ☒ 3. 1
  - ☐ 4. -1

Question ID : 630680385863

Option 1 ID : 6306801504170

Option 2 ID : 6306801504173

Option 3 ID : 6306801504171

Option 4 ID : 6306801504172

Status : Answered

Chosen Option : 3

Q.3 Find the value of  $1544^2 - 1456^2$ .

- Ans
- ☐ 1. 254000
  - ☐ 2. 244000
  - ☐ 3. 214000
  - ☒ 4. 264000

Question ID : 630680384855

Option 1 ID : 6306801500308

Option 2 ID : 6306801500307

Option 3 ID : 6306801500309

Option 4 ID : 6306801500306

Status : Answered

Chosen Option : 4

Q.4 The average of 18 numbers is 43. If each number is multiplied by 4, what will be the new average?

- Ans
- ☐ 1. 140
  - ☒ 2. 172
  - ☐ 3. 114
  - ☐ 4. 120

Question ID : 630680384866

Option 1 ID : 6306801500351

Option 2 ID : 6306801500353

Option 3 ID : 6306801500350

Option 4 ID : 6306801500352

Status : Answered

Chosen Option : 2

Q.5 Which of the following will have the maximum value, when  $s=100$  and  $t = 0.01$  ?

Ans ☒ 1.  $s^2-t^2$

☒ 2.  $\frac{s^2}{t^2}$

☒ 3.  $s^2t^2$

☒ 4.  $s^2+t^2$

Question ID : 630680384958

Option 1 ID : 6306801500721

Option 2 ID : 6306801500719

Option 3 ID : 6306801500718

Option 4 ID : 6306801500720

Status : Not Attempted and  
Marked For Review

Chosen Option : --

Q.6 Find the value of:

$$\frac{7}{4} \div \frac{14}{3} \text{ of } \frac{1}{6} + \left( \frac{1}{3} - \frac{1}{4} \right)$$

Ans ☒ 1.  $\frac{1}{48}$

☒ 2.  $\frac{1}{2}$

☒ 3.  $\frac{7}{48}$

☒ 4.  $\frac{1}{4}$

Question ID : 630680384895

Option 1 ID : 6306801500467

Option 2 ID : 6306801500466

Option 3 ID : 6306801500469

Option 4 ID : 6306801500468

Status : Not Attempted and  
Marked For Review

Chosen Option : --

Q.7 Find the value of  $a + b$ , if  $a - b = 23$  and  $ab = 174$ .

Ans ☒ 1. 35

☒ 2. 55

☒ 3. 45

☒ 4. 25

Question ID : 630680384853

Option 1 ID : 6306801500301

Option 2 ID : 6306801500300

Option 3 ID : 6306801500299

Option 4 ID : 6306801500298

Status : Answered

Chosen Option : 1

**Q.8** P and Q together can do a job in 25 days. P is five times as efficient as Q. In how many days can P alone do the job?

**Ans** ☒ 1. 30 days

☐ 2. 15 days

☐ 3. 20 days

☐ 4. 24 days

Question ID : 630680384942

Option 1 ID : 6306801500655

Option 2 ID : 6306801500657

Option 3 ID : 6306801500654

Option 4 ID : 6306801500656

Status : Answered

Chosen Option : 1

**Q.9** Pipes A and B can fill a tank in 55 hours and 44 hours, respectively and pipe C can empty the full tank in 40 hours. If all the pipes are opened together, how much time will be needed to make the tank full?

**Ans** ☒ 1.  $\frac{440}{7}$  hours

☐ 2.  $\frac{450}{7}$  hours

☐ 3.  $\frac{722}{5}$  hours

☐ 4.  $\frac{320}{9}$  hours

Question ID : 630680384939

Option 1 ID : 6306801500642

Option 2 ID : 6306801500645

Option 3 ID : 6306801500643

Option 4 ID : 6306801500644

Status : Answered

Chosen Option : 1

**Q.10** What will be remainder when  $(45^{45} + 45)$  is divided by 46?

**Ans** ☐ 1. 16

☒ 2. 44

☐ 3. 28

☐ 4. 34

Question ID : 630680384998

Option 1 ID : 6306801500878

Option 2 ID : 6306801500881

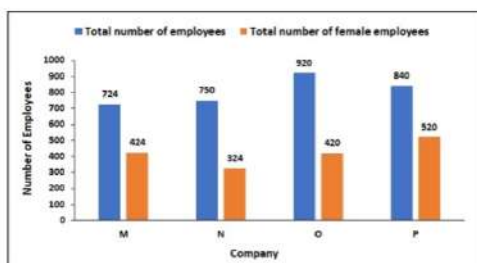
Option 3 ID : 6306801500879

Option 4 ID : 6306801500880

Status : Answered

Chosen Option : 2

**Q.11** The bar graph shows the number of total employees working in 4 different companies. It also shows the number of female employees in each company. The number of male employees in Company M is what percentage of the number of male employees in Company O?



- Ans
- ☒ 1. 70%
  - ☒ 2. 60%
  - ☒ 3. 65%
  - ☒ 4. 55%

Question ID : 630680384871

Option 1 ID : 6306801500373

Option 2 ID : 6306801500371

Option 3 ID : 6306801500372

Option 4 ID : 6306801500370

Status : Answered

Chosen Option : 2

**Q.12** A dealer marks his goods at 32% above the cost price. Then he allows 25% discount on it. What would be his loss percentage?

- Ans
- ☒ 1. 1%
  - ☒ 2. 3%
  - ☒ 3. 5%
  - ☒ 4. 2%

Question ID : 630680384923

Option 1 ID : 6306801500580

Option 2 ID : 6306801500581

Option 3 ID : 6306801500578

Option 4 ID : 6306801500579

Status : Answered

Chosen Option : 1

**Q.13** Find the length of the diagonal of a cuboid whose length, breadth, and height are 6 cm, 3 cm and 4 cm respectively.

- Ans
- ☒ 1.  $\sqrt{61}$  cm
  - ☒ 2.  $\sqrt{55}$  cm
  - ☒ 3.  $\sqrt{46}$  cm
  - ☒ 4.  $\sqrt{51}$  cm

Question ID : 630680384889

Option 1 ID : 6306801500443

Option 2 ID : 6306801500442

Option 3 ID : 6306801500444

Option 4 ID : 6306801500445

Status : Answered

Chosen Option : 1

Q.14 Find the area of the sector if the radius is 21 cm and with an angle of  $150^\circ$ .

- Ans
- ☒ 1.  $633.5 \text{ cm}^2$
  - ☒ 2.  $577.5 \text{ cm}^2$
  - ☒ 3.  $476.5 \text{ cm}^2$
  - ☒ 4.  $323.5 \text{ cm}^2$

Question ID : 630680385172  
Option 1 ID : 6306801501577  
Option 2 ID : 6306801501576  
Option 3 ID : 6306801501575  
Option 4 ID : 6306801501574  
Status : Answered  
Chosen Option : 2

Q.15 Find the curved surface area of the cylinder whose height is twice its radius and whose volume is  $3456\pi \text{ cm}^3$ .

- Ans
- ☒ 1.  $434\pi \text{ cm}^2$
  - ☒ 2.  $576\pi \text{ cm}^2$
  - ☒ 3.  $729\pi \text{ cm}^2$
  - ☒ 4.  $212\pi \text{ cm}^2$

Question ID : 630680385148  
Option 1 ID : 6306801501478  
Option 2 ID : 6306801501480  
Option 3 ID : 6306801501479  
Option 4 ID : 6306801501481  
Status : Answered  
Chosen Option : 2

Q.16 If the surface area of two spheres is in the ratio 196 : 441, then find the ratio of their radius.

- Ans
- ☒ 1. 22 : 14
  - ☒ 2. 21 : 13
  - ☒ 3. 2 : 3
  - ☒ 4. 22 : 13

Question ID : 630680384879  
Option 1 ID : 6306801500403  
Option 2 ID : 6306801500402  
Option 3 ID : 6306801500404  
Option 4 ID : 6306801500405  
Status : Not Attempted and Marked For Review  
Chosen Option : --



**Q.17** Raju walks a distance of 3200 meters in two hours and 4 km in the next two hours. Find the average speed of Raju.

- Ans**
- ☒ 1. 1.6 km/hr
  - ☒ 2. 1.1 km/hr
  - ☒ 3. 1.2 km/hr
  - ☒ 4. 1.8 km/hr

Question ID : 630680384862  
Option 1 ID : 6306801500337  
Option 2 ID : 6306801500335  
Option 3 ID : 6306801500334  
Option 4 ID : 6306801500336  
Status : Answered  
Chosen Option : 4

**Q.18** Two triangles ABC and XYZ are similar. Find the value of XZ, if AB = 14 cm, YX = 21 cm, and CA = 25 cm

- Ans**
- ☒ 1. 75 cm
  - ☒ 2. 37.5 cm
  - ☒ 3. 22.5 cm
  - ☒ 4. 50 cm

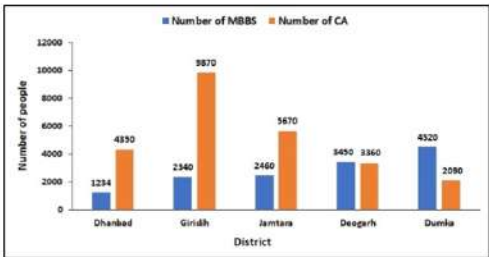
Question ID : 630680385183  
Option 1 ID : 6306801501620  
Option 2 ID : 6306801501621  
Option 3 ID : 6306801501618  
Option 4 ID : 6306801501619  
Status : Answered  
Chosen Option : 2

**Q.19** The angles of a quadrilateral are in the ratio 7: 8: 9: 12. Which of them will be the largest angle?

- Ans**
- ☒ 1.  $135^\circ$
  - ☒ 2.  $90^\circ$
  - ☒ 3.  $150^\circ$
  - ☒ 4.  $120^\circ$

Question ID : 630680384915  
Option 1 ID : 6306801500548  
Option 2 ID : 6306801500549  
Option 3 ID : 6306801500546  
Option 4 ID : 6306801500547  
Status : Answered  
Chosen Option : 4

**Q.20** The bar graph shows the number of MBBS and CA staying in different districts of Jharkhand. What is the total number of MBBS staying in the two districts together, least in number?



- Ans
- ☒ 1. 4532
  - ☒ 2. 3574
  - ☒ 3. 4800
  - ☒ 4. 5910

Question ID : 630680384875  
Option 1 ID : 6306801500387  
Option 2 ID : 6306801500386  
Option 3 ID : 6306801500389  
Option 4 ID : 6306801500388

Status : Answered

Chosen Option : 2

**Q.21** P, Q, and R started a business. P's investment is two times the investment of Q and Q's investment is three times the investment of R. If the yearly profit after a year is ₹ 14 lakhs. Find the difference in investment (in lakhs) of Q and R.

- Ans
- ☒ 1. ₹ 4.2 lakhs
  - ☒ 2. ₹ 1.2 lakhs
  - ☒ 3. ₹ 3.2 lakhs
  - ☒ 4. ₹ 2.8 lakhs

Question ID : 630680384931  
Option 1 ID : 6306801500610  
Option 2 ID : 6306801500611  
Option 3 ID : 6306801500613  
Option 4 ID : 6306801500612

Status : Answered

Chosen Option : 4

**Q.22** A man sold his bike for ₹15,000 at 12% profit. At what approximate price would he have sold to incur a loss of 15%?

- Ans
- ☒ 1. ₹11,552
  - ☒ 2. ₹11,384
  - ☒ 3. ₹14,050
  - ☒ 4. ₹15,044

Question ID : 630680384926  
Option 1 ID : 6306801500592  
Option 2 ID : 6306801500591  
Option 3 ID : 6306801500593  
Option 4 ID : 6306801500590

Status : Answered

Chosen Option : 2

**Q.23** A person who spends 56% of his income is able to save ₹3256 per month. Find his monthly expenditure.

- Ans** ☒ 1. ₹ 4144  
☐ 2. ₹ 3226  
☐ 3. ₹ 5221  
☐ 4. ₹ 5244

Question ID : 630680384903  
Option 1 ID : 6306801500499  
Option 2 ID : 6306801500500  
Option 3 ID : 6306801500501  
Option 4 ID : 6306801500498  
Status : Answered  
Chosen Option : 1

**Q.24** Find the height of the cylinder whose volume is  $2454 \text{ cm}^3$  and the area of the base is  $122.7 \text{ cm}^2$ .

- Ans** ☐ 1. 21 cm  
☒ 2. 20 cm  
☐ 3. 19 cm  
☐ 4. 23 cm

Question ID : 630680384884  
Option 1 ID : 6306801500422  
Option 2 ID : 6306801500423  
Option 3 ID : 6306801500424  
Option 4 ID : 6306801500425  
Status : Answered  
Chosen Option : 2

**Q.25** If  $A : B = 3 : 4$  and  $B : C = 4 : 9$ , then find the value of  $A + B : B + C : C + A$ .

- Ans** ☐ 1. 12: 13: 4  
☐ 2. 2: 8: 11  
☒ 3. 7:13:12  
☐ 4. 4: 12: 13

Question ID : 630680384934  
Option 1 ID : 6306801500625  
Option 2 ID : 6306801500624  
Option 3 ID : 6306801500623  
Option 4 ID : 6306801500622  
Status : Answered  
Chosen Option : 3

Section : English Comprehension

Q.1 The sentences given below are all part of a paragraph but do not necessarily fall in the order that they are in. The first and the last sentences of the paragraph are given. Choose the option that arranges these sentences to form a meaningful paragraph. The blind was down and the room dim. He caught a glimpse of a most singular thing, what

A. on white, very like the face of a pale pansy. Then he was struck violently in the chest,  
B. no time to observe. A waving of indecipherable shapes, a blow, and a concussion. There  
C. seemed a handless arm waving towards him, and a face of three huge indeterminate spots  
D. hurled back, and the door slammed in his face and locked. It was so rapid that it gave him  
he stood on the dark little landing, wondering what it might be that he had seen.

- Ans
- ☒ 1. DBAC
  - ☒ 2. ACBD
  - ☒ 3. BDAC
  - ☒ 4. CADB

Question ID : 630680385352  
Option 1 ID : 6306801502258  
Option 2 ID : 6306801502260  
Option 3 ID : 6306801502261  
Option 4 ID : 6306801502259  
Status : Answered  
Chosen Option : 4

Q.2 Select the most appropriate missing sentence to complete the paragraph meaningfully. A light breeze fanned her cheek and those big mountains about her made her feel happy as never before. She looked up at the mountain-tops till they all seemed to have faces, and soon they were familiar to her, like old friends. Suddenly she heard a loud, \_\_\_\_\_.

- Ans
- ☒ 1. sharp scream, and looking up she beheld the largest bird she had ever seen.
  - ☒ 2. creek and standing there was a tall, aged man, clad in a long red robe.
  - ☒ 3. smile, looking up she asked, "How do you make a snowman?"
  - ☒ 4. hymn and anthem never heard but at Christmas.

Question ID : 630680385595  
Option 1 ID : 6306801503159  
Option 2 ID : 6306801503160  
Option 3 ID : 6306801503158  
Option 4 ID : 6306801503161  
Status : Answered  
Chosen Option : 1

Q.3 Select the most appropriate antonym of the given word. Modesty

- Ans
- ☒ 1. Ostentation
  - ☒ 2. Innocent
  - ☒ 3. Displace
  - ☒ 4. Loathing

Question ID : 630680385412  
Option 1 ID : 6306801502478  
Option 2 ID : 6306801502479  
Option 3 ID : 6306801502481  
Option 4 ID : 6306801502480  
Status : Answered  
Chosen Option : 1

**Q.4** The sentences given below are all part of a paragraph but do not necessarily fall in the order that they are in. The first and the last sentences of the paragraph are given. Choose the option that arranges these sentences to form a meaningful paragraph.  
When I was thirteen years of age, we all went on a party of pleasure  
A. to remain a day confined to the inn. In this house I chanced to find a  
B. the theory which he attempts to demonstrate and the wonderful  
C. to the baths near Thonon; the inclemency of the weather obliged us  
D. volume of the works of Cornelius Agrippa. I opened it with apathy;  
facts which he relates soon changed this feeling into enthusiasm.

- Ans** ☒ 1. DCAB  
☒ 2. CABD  
☒ 3. BACD  
☒ 4. ABDC

Question ID : 630680385360  
Option 1 ID : 6306801502292  
Option 2 ID : 6306801502293  
Option 3 ID : 6306801502290  
Option 4 ID : 6306801502291  
Status : Not Attempted and Marked For Review  
Chosen Option : --

**Comprehension:**

Based on the following cloze passage answer the question given below:

Effective time management is crucial for productivity and success in various areas of life. It involves prioritizing tasks, setting goals, and (1) \_\_\_\_\_ deadlines.

To manage time effectively, it is important to eliminate (2) \_\_\_\_\_ and distractions. This can be achieved by creating a conducive work environment and practicing self-discipline. Additionally, learning to delegate tasks and (3) \_\_\_\_\_ on high-impact activities can maximize productivity.

**SubQuestion No : 5**

**Q.5** Fill in the blank (1) with the appropriate word from the options below:

- Ans** ☒ 1. attending  
☒ 2. adhering  
☒ 3. meeting  
☒ 4. extending

Question ID : 630680385272  
Option 1 ID : 6306801501960  
Option 2 ID : 6306801501961  
Option 3 ID : 6306801501958  
Option 4 ID : 6306801501959  
Status : Answered  
Chosen Option : 3

**Comprehension:**

Based on the following cloze passage answer the question given below:

Effective time management is crucial for productivity and success in various areas of life. It involves prioritizing tasks, setting goals, and (1) \_\_\_\_\_ deadlines.

To manage time effectively, it is important to eliminate (2) \_\_\_\_\_ and distractions. This can be achieved by creating a conducive work environment and practicing self-discipline. Additionally, learning to delegate tasks and (3) \_\_\_\_\_ on high-impact activities can maximize productivity.

**SubQuestion No : 6**

**Q.6** Fill in the blank (3) with the appropriate word from the options below:

- Ans
- ☒ 1. ~~ruminate~~
  - ☒ 2. ~~procrastinate~~
  - ☒ 3. **concentrate**
  - ☒ 4. ~~dwell~~

Question ID : 630680385274

Option 1 ID : 6306801501968

Option 2 ID : 6306801501967

Option 3 ID : 6306801501966

Option 4 ID : 6306801501969

Status : Answered

Chosen Option : 2

**Comprehension:**

Based on the following cloze passage answer the question given below:

Effective time management is crucial for productivity and success in various areas of life. It involves prioritizing tasks, setting goals, and (1) \_\_\_\_\_ deadlines.

To manage time effectively, it is important to eliminate (2) \_\_\_\_\_ and distractions. This can be achieved by creating a conducive work environment and practicing self-discipline. Additionally, learning to delegate tasks and (3) \_\_\_\_\_ on high-impact activities can maximize productivity.

**SubQuestion No : 7**

**Q.7** Fill in the blank (2) with the appropriate word from the options below:

- Ans
- ☒ 1. ~~engagements~~
  - ☒ 2. ~~commitments~~
  - ☒ 3. ~~opportunities~~
  - ☒ 4. **interruptions**

Question ID : 630680385273

Option 1 ID : 6306801501964

Option 2 ID : 6306801501965

Option 3 ID : 6306801501963

Option 4 ID : 6306801501962

Status : Answered

Chosen Option : 1

Q.8 Select the correct question tag for the following statement:  
"They've already left, \_\_\_\_\_?"

- Ans
- ☐ 1. have they?
  - ☐ 2. do they?
  - ☐ 3. didn't they?
  - ☒ 4. haven't they?

Question ID : 630680385241  
Option 1 ID : 6306801501852  
Option 2 ID : 6306801501853  
Option 3 ID : 6306801501851  
Option 4 ID : 6306801501850  
Status : Answered  
Chosen Option : 4

Comprehension:

Read the passage carefully and choose the best answer to each question out of the four alternatives

Education plays a pivotal role in shaping individuals and societies. It equips people with knowledge, skills, and critical thinking abilities necessary for personal and societal development. Education is not limited to formal institutions but also encompasses lifelong learning and self-improvement.

SubQuestion No : 9

Q.9 Which inference can be drawn from the passage?

- Ans
- ☐ 1. The impact of education on society is negligible
  - ☐ 2. Education is solely the responsibility of formal institutions
  - ☐ 3. Learning is only valuable in the early stages of life
  - ☒ 4. Education is essential for personal and societal development

Question ID : 630680385334  
Option 1 ID : 6306801502189  
Option 2 ID : 6306801502186  
Option 3 ID : 6306801502187  
Option 4 ID : 6306801502188  
Status : Answered  
Chosen Option : 4

Comprehension:

Read the passage carefully and choose the best answer to each question out of the four alternatives

Education plays a pivotal role in shaping individuals and societies. It equips people with knowledge, skills, and critical thinking abilities necessary for personal and societal development. Education is not limited to formal institutions but also encompasses lifelong learning and self-improvement.

SubQuestion No : 10

Q.10 What is the tone of the passage?

- Ans
- ☒ 1. Informative and objective
  - ☐ 2. Critical and sceptical
  - ☐ 3. Inspirational and motivational
  - ☐ 4. Discouraging and pessimistic

Question ID : 630680385333  
Option 1 ID : 6306801502184  
Option 2 ID : 6306801502183  
Option 3 ID : 6306801502182  
Option 4 ID : 6306801502185  
Status : Answered  
Chosen Option : 1

**Comprehension:**

Read the passage carefully and choose the best answer to each question out of the four alternatives

Education plays a pivotal role in shaping individuals and societies. It equips people with knowledge, skills, and critical thinking abilities necessary for personal and societal development. Education is not limited to formal institutions but also encompasses lifelong learning and self-improvement.

**SubQuestion No : 11**

**Q.11 Which title best represents the passage?**

- Ans
- ☐ 1. The Challenges of Modern Education Systems
  - ☐ 2. The Impact of Education on Societal Progress
  - ☐ 3. The Benefits of Lifelong Learning
  - ☒ 4. The Role of Education in Personal Growth

Question ID : 630680385331  
Option 1 ID : 6306801502175  
Option 2 ID : 6306801502176  
Option 3 ID : 6306801502177  
Option 4 ID : 6306801502174  
Status : Answered  
Chosen Option : 4

**Comprehension:**

Read the passage carefully and choose the best answer to each question out of the four alternatives

Education plays a pivotal role in shaping individuals and societies. It equips people with knowledge, skills, and critical thinking abilities necessary for personal and societal development. Education is not limited to formal institutions but also encompasses lifelong learning and self-improvement.

**SubQuestion No : 12**

**Q.12 How does the passage connect to the world?**

- Ans
- ☒ 1. By examining the influence of education on social mobility
  - ☐ 2. By analysing the impact of education on technological advancements
  - ☐ 3. By exploring the history of educational philosophies
  - ☐ 4. By discussing the correlation between education and income levels

Question ID : 630680385332  
Option 1 ID : 6306801502179  
Option 2 ID : 6306801502180  
Option 3 ID : 6306801502181  
Option 4 ID : 6306801502178  
Status : Answered  
Chosen Option : 1

**Q.13 Identify the synonym for the word "vivid" in the following sentence**  
The artist used vivid colours to bring the painting to life.

- Ans
- ☐ 1. Dull
  - ☐ 2. Faded
  - ☒ 3. Bright
  - ☐ 4. Pale

Question ID : 630680385314  
Option 1 ID : 6306801502122  
Option 2 ID : 6306801502123  
Option 3 ID : 6306801502124  
Option 4 ID : 6306801502125  
Status : Answered  
Chosen Option : 3



Q.14 Choose the word that is the antonym of the bracketed word:  
The CEO's decision to (downsize) the company was inevitable due to the current economic crisis

- Ans ☒ 1. Reduce  
☒ 2. Stun  
☒ 3. Grow  
☒ 4. Expand

Question ID : 630680385522  
Option 1 ID : 6306801502883  
Option 2 ID : 6306801502884  
Option 3 ID : 6306801502885  
Option 4 ID : 6306801502882  
Status : Answered  
Chosen Option : 3

Q.15 Which of the following words is a synonym for "pristine"?

- Ans ☒ 1. Immaculate  
☒ 2. Tarnished  
☒ 3. Contaminated  
☒ 4. Dirty

Question ID : 630680385313  
Option 1 ID : 6306801502118  
Option 2 ID : 6306801502120  
Option 3 ID : 6306801502121  
Option 4 ID : 6306801502119  
Status : Answered  
Chosen Option : 1

Q.16 Select the word segment that substitutes the bracketed segment correctly and completes the sentence meaningfully.  
The [dog barked loud], alerting the family to the presence of an intruder.

- Ans ☒ 1. dog barked loudness  
☒ 2. no correction required  
☒ 3. dog barked loudly  
☒ 4. dog barking loud

Question ID : 630680385282  
Option 1 ID : 6306801501995  
Option 2 ID : 6306801501997  
Option 3 ID : 6306801501994  
Option 4 ID : 6306801501996  
Status : Answered  
Chosen Option : 4

Q.17 Identify the one-word substitution in the following sentence:  
What is the term for "a person who is excessively concerned about their health"?

- Ans
- ☐ 1. Nutritionist
  - ☐ 2. Physician
  - ☐ 3. Pharmacist
  - ☒ 4. Hypochondriac

Question ID : 630680385293  
Option 1 ID : 6306801502040  
Option 2 ID : 6306801502039  
Option 3 ID : 6306801502041  
Option 4 ID : 6306801502038  
Status : Answered  
Chosen Option : 4

Q.18 Choose the correct phrasal verb to complete the sentence:  
She always \_\_\_\_\_ her ideas in team meetings to encourage discussion.

- Ans
- ☐ 1. get along with
  - ☐ 2. put up with
  - ☐ 3. take off
  - ☒ 4. bring up

Question ID : 630680385237  
Option 1 ID : 6306801501836  
Option 2 ID : 6306801501834  
Option 3 ID : 6306801501837  
Option 4 ID : 6306801501835  
Status : Answered  
Chosen Option : 2

Q.19 Select the most appropriate missing sentence to complete the paragraph meaningfully.  
The old man made me go to the skiff and fetch the things he had got. There was a fifty-pound sack of corn meal, and a side of bacon, ammunition, and a four-gallon jug of whisky, and an old book and two newspapers for wadding, besides some tow. I toted up a load, and went back and set down on the bow of the skiff to rest. I thought it all over, \_\_\_\_\_.

- Ans
- ☐ 1. and I wondered if I would fall right through the earth!
  - ☐ 2. and decided, I shall continue my journal concerning the stranger at intervals.
  - ☒ 3. and I reckoned I would walk off with the gun and some lines, and take to the woods when I run away.
  - ☐ 4. and I thought that I shall think nothing of tumbling down stairs!

Question ID : 630680385355  
Option 1 ID : 6306801502270  
Option 2 ID : 6306801502273  
Option 3 ID : 6306801502271  
Option 4 ID : 6306801502272  
Status : Answered  
Chosen Option : 4

Q.20 Identify the one-word substitution in the following sentence:  
What is the term for "a person who avoids or dislikes social interactions"?

- Ans
- ☒ 1. Extrovert
  - ☒ 2. Introvert
  - ☒ 3. Hermit
  - ☒ 4. Ambivert

Question ID : 630680385289  
Option 1 ID : 6306801502023  
Option 2 ID : 6306801502022  
Option 3 ID : 6306801502025  
Option 4 ID : 6306801502024  
Status : Answered  
Chosen Option : 2

Q.21 Select the word segment that substitutes the bracketed segment correctly and completes the sentence meaningfully.  
He spoke [fluent and articulate], impressing the audience with his eloquence.

- Ans
- ☒ 1. no correction required
  - ☒ 2. fluently and articulated well
  - ☒ 3. fluently and articulation
  - ☒ 4. fluently and articulate

Question ID : 630680385290  
Option 1 ID : 6306801502029  
Option 2 ID : 6306801502027  
Option 3 ID : 6306801502028  
Option 4 ID : 6306801502026  
Status : Answered  
Chosen Option : 4

Q.22 Choose the correct option to fill in the blank that completes the proverb used in the given situation  
When I visited Japan, I made sure to take off my shoes before entering the traditional Japanese house, remembering the proverb 'When in Rome,\_\_\_\_\_.

- Ans
- ☒ 1. go with the flow
  - ☒ 2. follow your own path
  - ☒ 3. be yourself
  - ☒ 4. do as the Romans do

Question ID : 630680385302  
Option 1 ID : 6306801502076  
Option 2 ID : 6306801502075  
Option 3 ID : 6306801502077  
Option 4 ID : 6306801502074  
Status : Answered  
Chosen Option : 4

Q.23 Fill in the blank with the most appropriate option.  
I resented it, \_\_\_\_\_ it seemed to imply that he expected me to respond to it.

- Ans ☒ 1. as it is  
☒ 2. because  
☒ 3. whereas  
☒ 4. unless

Question ID : 630680385336  
Option 1 ID : 6306801502194  
Option 2 ID : 6306801502197  
Option 3 ID : 6306801502196  
Option 4 ID : 6306801502195  
Status : Not Answered  
Chosen Option : --

Q.24 Select the option that best represents the meaning of the idioms used in the given situation  
Your friend advises you, "The early bird catches the worm," when discussing the importance of punctuality. What does this expression imply?

- Ans ☒ 1. We should take advantage of opportunities by being proactive and prompt.  
☒ 2. We should wake up early to have a productive day.  
☒ 3. We should prioritize rest and relaxation to maintain good health.  
☒ 4. We should always be prepared for expected opportunities.

Question ID : 630680385297  
Option 1 ID : 6306801502056  
Option 2 ID : 6306801502054  
Option 3 ID : 6306801502057  
Option 4 ID : 6306801502055  
Status : Answered  
Chosen Option : 1

Q.25 Fill in the Blank:  
"After days of heavy rain, the river \_\_\_\_\_ its banks, causing widespread flooding in the area."

- Ans ☒ 1. overflowed  
☒ 2. surpassed  
☒ 3. subsided  
☒ 4. stagnated

Question ID : 630680385472  
Option 1 ID : 6306801502704  
Option 2 ID : 6306801502703  
Option 3 ID : 6306801502702  
Option 4 ID : 6306801502705  
Status : Answered  
Chosen Option : 1