



Teachingninja.in



Latest Govt Job updates



Private Job updates



Free Mock tests available



Visit - teachingninja.in

DDA ASO

Previous Year Paper
26 Sept, 2023 Shift 1





DELHI DEVELOPMENT AUTHORITY
RECRUITMENT CELL
VIKAS SADAN, INA, NEW DELHI - 110023
(<https://www.dda.gov.in>)

Advertisement No. 02/2023/Recdt. Cell/Pers./DDA

Test Date	26/09/2023
Test Time	8:30 AM - 9:30 AM
Subject	Assistant Section Officer (ASO)

Section : General Intelligence and Reasoning

Q.1 In this question, a statement has been given followed by three courses of action numbered I, II and III. Assuming that all information in the statement is true, analyse the three actions together and determine whether any of them logically and definitely follow(s) from the information given in the statement.

Statement:

A truck lost its balance and turned over after passing through a pothole.

Courses of Action:

- I) The municipality must cover up all potholes immediately to prevent any such cases in the future.
II) The contractor of the road must not be given any future contracts.

- Ans** ☒ 1. Only II follows
☒ 2. Only I follows
☒ 3. Both I and II follows
☒ 4. Neither I nor II follows

Question ID : 630680384686
Option 1 ID : 6306801499631
Option 2 ID : 6306801499630
Option 3 ID : 6306801499632
Option 4 ID : 6306801499633
Status : Answered
Chosen Option : 2

Q.2 Given a number series, which alternative should be chosen to continue the same pattern and fill in the blank space?
10, 43, 98, 175, _____

- Ans** ☒ 1. 374
☒ 2. 389
☒ 3. 180
☒ 4. 274

Question ID : 630680384599
Option 1 ID : 6306801499283
Option 2 ID : 6306801499282
Option 3 ID : 6306801499285
Option 4 ID : 6306801499284
Status : Answered
Chosen Option : 4

Q.3 In the given question four letter-cluster have been given, out of which three are alike in some manner, while one is different. Select the odd one from the given options.

- Ans**
- ☒ 1. BDHP
 - ☒ 2. MOSY
 - ☒ 3. FHLT
 - ☒ 4. JLPX

Question ID : 630680386199
Option 1 ID : 6306801505506
Option 2 ID : 6306801505509
Option 3 ID : 6306801505507
Option 4 ID : 6306801505508
Status : Answered
Chosen Option : 2

Q.4 If the position of first and the third digits within each number are interchanged, which of the following will be the first digit of the third highest number?
459 364 521 731 942

- Ans**
- ☒ 1. 9
 - ☒ 2. 2
 - ☒ 3. 4
 - ☒ 4. 3

Question ID : 630680384551
Option 1 ID : 6306801499093
Option 2 ID : 6306801499091
Option 3 ID : 6306801499090
Option 4 ID : 6306801499092
Status : Answered
Chosen Option : 2

Q.5 Five people Pinki, Kashish, Tina, Veena and Rakhi are sitting on a circular table facing away from the centre. Veena is to the immediate left of Pinki. Tina sits exactly in between Rakhi and Veena. Who is sitting to the immediate left of Rakhi?

- Ans**
- ☒ 1. Tina
 - ☒ 2. Kashish
 - ☒ 3. Veena
 - ☒ 4. Pinki

Question ID : 630680384717
Option 1 ID : 6306801499755
Option 2 ID : 6306801499757
Option 3 ID : 6306801499754
Option 4 ID : 6306801499756
Status : Answered
Chosen Option : 2

Q.6 Danyal said, "This girl is the wife of the grandson of my mother." Who is Danyal to the girl ?

- Ans
- ☒ 1. Paternal grandfather
 - ☒ 2. Father-in-law
 - ☒ 3. Brother-in-law
 - ☒ 4. Father's brother

Question ID : 630680384570
Option 1 ID : 6306801499169
Option 2 ID : 6306801499167
Option 3 ID : 6306801499166
Option 4 ID : 6306801499168
Status : Answered
Chosen Option : 2

Q.7 In a certain code language, if MARUTI is coded as 76, LANDROVER is coded as 100, then what will MERCEDES be coded as?

- Ans
- ☒ 1. 84
 - ☒ 2. 46
 - ☒ 3. 102
 - ☒ 4. 64

Question ID : 630680384681
Option 1 ID : 6306801499612
Option 2 ID : 6306801499610
Option 3 ID : 6306801499613
Option 4 ID : 6306801499611
Status : Answered
Chosen Option : 4

Q.8 If 'M × N' means 'M is the sister of N'.
If 'M + N' means 'M is the brother of N'.
If 'M ÷ N' means 'M is the son of N'.
If 'M - N' means 'M is the daughter of N'.

How is X related to A in the expression 'X + Y × Z - A'?

- Ans
- ☒ 1. Son
 - ☒ 2. Father
 - ☒ 3. Husband
 - ☒ 4. Brother

Question ID : 630680384472
Option 1 ID : 6306801498774
Option 2 ID : 6306801498775
Option 3 ID : 6306801498777
Option 4 ID : 6306801498776
Status : Answered
Chosen Option : 1

Q.9 There is some relationship between the two terms (letter clusters) on the left of the sign (:). The same relationship exists between the two terms on the right of the sign (: :) of which one is missing. Find the missing one from the four alternatives.
KMPT : LNQU :: ACFJ : ?

- Ans**
- ☒ 1. ACBI
 - ☒ 2. BDGK
 - ☒ 3. BDKG
 - ☒ 4. BEGL

Question ID : 630680384606
Option 1 ID : 6306801499311
Option 2 ID : 6306801499312
Option 3 ID : 6306801499313
Option 4 ID : 6306801499310
Status : Answered
Chosen Option : 2

Q.10 Select the option that is related to the third word in the same way as the second word is related to the first word.
ORDER : COMMAND :: TRUE : ?

- Ans**
- ☒ 1. INCORRECT
 - ☒ 2. IMPROPER
 - ☒ 3. FALSE
 - ☒ 4. PRECISE

Question ID : 630680384689
Option 1 ID : 6306801499644
Option 2 ID : 6306801499645
Option 3 ID : 6306801499643
Option 4 ID : 6306801499642
Status : Answered
Chosen Option : 4

Q.11 Select the odd number in the following number series.
47, 94, 282, 1182, 5640, 33840

- Ans**
- ☒ 1. 5640
 - ☒ 2. 1182
 - ☒ 3. 47
 - ☒ 4. 282

Question ID : 630680384701
Option 1 ID : 6306801499693
Option 2 ID : 6306801499692
Option 3 ID : 6306801499690
Option 4 ID : 6306801499691
Status : Answered
Chosen Option : 2

Q.12 In the following triad, each group of letters is related to the subsequent one following a certain logic.
L2Q4F - Q8V16K - M24R48G
Which of the following option follows the same logic?

- Ans** ☒ 1. B3T1F - G12Y4K - C36U12G
☐ 2. E6F2H - J12K4M - O60P20R
☐ 3. A1D5U - F4I20Z - B16E80V
☐ 4. Q3K6F - V9P36K - R81L72G

Question ID : 630680386188
Option 1 ID : 6306801505464
Option 2 ID : 6306801505465
Option 3 ID : 6306801505463
Option 4 ID : 6306801505462
Status : Answered
Chosen Option : 1

Q.13 In a certain code language, if REMOVE is coded as QFLPUF, LIVELY is coded as KJUFKX, then what will MASTER be coded as?

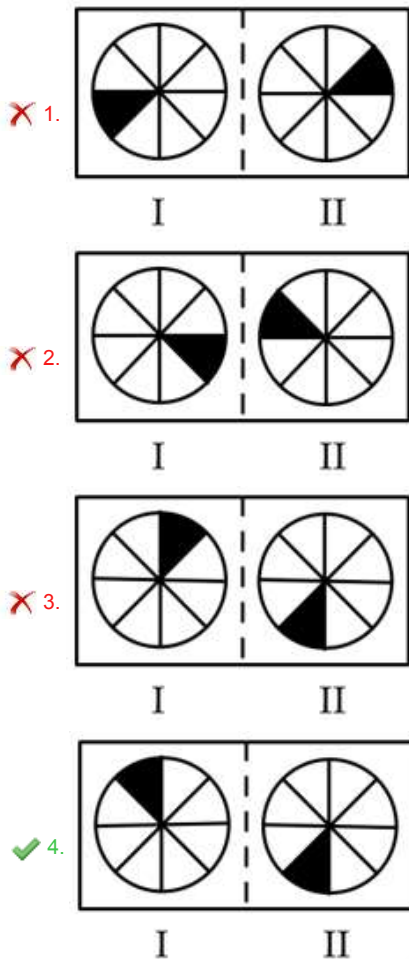
- Ans** ☐ 1. LBRFSFS
☐ 2. LBRUDS
☒ 3. LBRSFQ
☐ 4. NZTSFQ

Question ID : 630680384675
Option 1 ID : 6306801499587
Option 2 ID : 6306801499588
Option 3 ID : 6306801499586
Option 4 ID : 6306801499589
Status : Answered
Chosen Option : 2



Q.14 Choose the figure pair which is different from the rest.

Ans



Question ID : 630680384547

Option 1 ID : 6306801499075

Option 2 ID : 6306801499074

Option 3 ID : 6306801499077

Option 4 ID : 6306801499076

Status : Answered

Chosen Option : 4

Q.15 Three Statements are given followed by three conclusions numbered I, II and III. Assuming the statements to be true, even if they seem to be at variance with commonly known facts, decide which of the conclusions logically follow(s) from the statements.

Statement:

Statement I: Some shirts are jackets.

Statement II: All jackets are trousers.

Statement III: Some trousers are shoes.

Conclusion:

Conclusion I: Some jackets are shoes.

Conclusion II: Some shirts are trousers.

Conclusion III: Some shoes are shirts.

Ans

- ✗ 1. Only I and III follows
- ✗ 2. Only II and III follows
- ✓ 3. Only II follows
- ✗ 4. None of the conclusions follow

Question ID : 630680384533

Option 1 ID : 6306801499020

Option 2 ID : 6306801499019

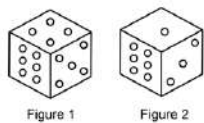
Option 3 ID : 6306801499018

Option 4 ID : 6306801499021

Status : Answered

Chosen Option : 3

Q.16 Figure 1 and 2 shows two positions of a dice. If the top face of the dice shows the number 3, what number will be on the opposite face at the bottom?



- Ans**
- ☒ 1. 2
 - ☒ 2. 6
 - ☒ 3. 5
 - ☒ 4. 4

Question ID : 630680384836
Option 1 ID : 6306801500232
Option 2 ID : 6306801500231
Option 3 ID : 6306801500233
Option 4 ID : 6306801500230
Status : Answered
Chosen Option : 3

Q.17 Seven persons from P to V live in a 7-storey building with each floor numbered from one to seven (where the top floor is numbered 7 and the ground floor is numbered 1). V lives just above Q. Only three persons live between R and S. S lives immediately below P. No one lives between P and Q such that Q lives immediately above P. Only one person lives between R and T. How many people lives between R and Q?

- Ans**
- ☒ 1. 0
 - ☒ 2. 3
 - ☒ 3. 2
 - ☒ 4. 1

Question ID : 630680386203
Option 1 ID : 6306801505525
Option 2 ID : 6306801505524
Option 3 ID : 6306801505523
Option 4 ID : 6306801505522
Status : Answered
Chosen Option : 4

Q.18 Rearranging the given words in ascending alphabetical order, identify the word that appears at the fourth place.
Apprehensive Articulate Abundance Ascertain Admirable

- Ans**
- ☒ 1. Apprehensive
 - ☒ 2. Articulate
 - ☒ 3. Ascertain
 - ☒ 4. Admirable

Question ID : 630680384756
Option 1 ID : 6306801499910
Option 2 ID : 6306801499913
Option 3 ID : 6306801499912
Option 4 ID : 6306801499911
Status : Answered
Chosen Option : 2

Q.19 Replace the missing element (?) in the following series with suitable option that follows a certain pattern between each consequent pair :
DE, II, MN, ?, RS, ST

- Ans**
- ☒ 1. RS
 - ☒ 2. QR
 - ☒ 3. OP
 - ☒ 4. PQ

Question ID : 630680384623
Option 1 ID : 6306801499380
Option 2 ID : 6306801499379
Option 3 ID : 6306801499378
Option 4 ID : 6306801499381
Status : Answered
Chosen Option : 4

Q.20 If all the vowels within each letter-clusters are decreased by 1 and the consonants are increased by one, how many letter-clusters thus formed will have 2 vowels?
DRUM LEFT MAIN JUNK DEAL

- Ans**
- ☒ 1. 3
 - ☒ 2. 0
 - ☒ 3. 2
 - ☒ 4. 1

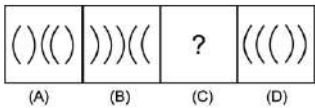
Question ID : 630680384650
Option 1 ID : 6306801499489
Option 2 ID : 6306801499488
Option 3 ID : 6306801499486
Option 4 ID : 6306801499487
Status : Answered
Chosen Option : 2

Q.21 Select the odd number in the following number series.
18, 36, 54, 76, 90, 108

- Ans**
- ☒ 1. 36
 - ☒ 2. 54
 - ☒ 3. 76
 - ☒ 4. 90

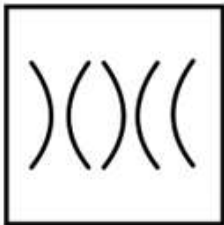
Question ID : 630680384660
Option 1 ID : 6306801499526
Option 2 ID : 6306801499527
Option 3 ID : 6306801499528
Option 4 ID : 6306801499529
Status : Answered
Chosen Option : 3

Q.22 Figure A and B are related in a particular way or manner. Establish the same relationship between C and D choosing from the given options.

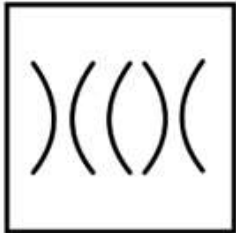


Ans

✗ 1.



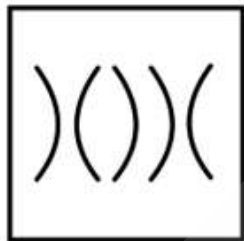
✗ 2.



✗ 3.



✓ 4.



Question ID : 630680384645
Option 1 ID : 6306801499467
Option 2 ID : 6306801499468
Option 3 ID : 6306801499466
Option 4 ID : 6306801499469
Status : Answered
Chosen Option : 4

Q.23 Three Statements are given followed by two conclusions numbered I and II. Assuming the statements to be true, even if they seem to be at variance with commonly known facts, decide which of the conclusions logically follow(s) from the statements.

Statement:

Statement I: Some convex are not concave.

Statement II: Some concave are plain.

Statement III: All plain are regular.

Conclusion:

Conclusion I: Some regular are concave.

Conclusion II: All convex being regular is a possibility.

- Ans**
- ☒ 1. Neither conclusion I nor II follows
 - ☒ 2. Only conclusion II follows
 - ☒ 3. Both conclusions I and II follow
 - ☒ 4. Only conclusion I follows

Question ID : 630680384531

Option 1 ID : 6306801499013

Option 2 ID : 6306801499011

Option 3 ID : 6306801499012

Option 4 ID : 6306801499010

Status : Answered

Chosen Option : 3

Q.24 Select the odd number in the following number series:

910, 430, 210, 70, 10, -20

- Ans**
- ☒ 1. 430
 - ☒ 2. 70
 - ☒ 3. 210
 - ☒ 4. -20

Question ID : 630680384503

Option 1 ID : 6306801498899

Option 2 ID : 6306801498901

Option 3 ID : 6306801498898

Option 4 ID : 6306801498900

Status : Answered

Chosen Option : 3

Q.25 Select the odd number in the following number series:

8, 9, 17, 44, 110, 233, 449

- Ans**
- ☒ 1. 233
 - ☒ 2. 44
 - ☒ 3. 449
 - ☒ 4. 110

Question ID : 630680384467

Option 1 ID : 6306801498756

Option 2 ID : 6306801498754

Option 3 ID : 6306801498755

Option 4 ID : 6306801498757

Status : Answered

Chosen Option : 4

Section : General Awareness

Q.1 Which of the following is the hottest state of India?

- Ans ☒ 1. Jharkhand
☒ 2. Assam
☒ 3. Rajasthan
☒ 4. Gujrat

Question ID : 630680384310
Option 1 ID : 6306801498129
Option 2 ID : 6306801498127
Option 3 ID : 6306801498126
Option 4 ID : 6306801498128
Status : Answered
Chosen Option : 3

Q.2 The "Reserve Bank of India" (RBI) formulates the monetary policy of India. The Monetary Policy Committee (MPC) determines which key policy rate in India?

- Ans ☒ 1. Statutory Liquidity Ratio (SLR)
☒ 2. Cash Reserve Ratio (CRR)
☒ 3. Repo Rate
☒ 4. Bank Interest Rates

Question ID : 630680384181
Option 1 ID : 6306801497614
Option 2 ID : 6306801497617
Option 3 ID : 6306801497616
Option 4 ID : 6306801497615
Status : Answered
Chosen Option : 1

Q.3 "All India Muslim League" was founded in 1906 during a session held in which city of British India?

- Ans ☒ 1. Lahore
☒ 2. Lucknow
☒ 3. Dhaka
☒ 4. Mumbai

Question ID : 630680384224
Option 1 ID : 6306801497786
Option 2 ID : 6306801497789
Option 3 ID : 6306801497788
Option 4 ID : 6306801497787
Status : Answered
Chosen Option : 3

Q.4 In which year was the Environment Protection Act of India enacted?

- Ans ☒ 1. 1983
☒ 2. 1986
☒ 3. 1989
☒ 4. 1999

Question ID : 630680384296
Option 1 ID : 6306801498071
Option 2 ID : 6306801498072
Option 3 ID : 6306801498070
Option 4 ID : 6306801498073
Status : Answered
Chosen Option : 1

Q.5 In which year did the World War I begin?

- Ans ☒ 1. 1914
- ☐ 2. 1925
- ☐ 3. 1920
- ☐ 4. 1923

Question ID : 630680384335
Option 1 ID : 6306801498227
Option 2 ID : 6306801498228
Option 3 ID : 6306801498226
Option 4 ID : 6306801498229
Status : Answered
Chosen Option : 1

Q.6 The Rashtrakuta Empire reached its peak under the rule of which king, known for his military conquests and patronage of art and literature?

- Ans ☐ 1. Krishna III
- ☐ 2. Pulakeshin II
- ☒ 3. Amoghavarsha I
- ☐ 4. Govinda III

Question ID : 630680384436
Option 1 ID : 6306801498631
Option 2 ID : 6306801498630
Option 3 ID : 6306801498632
Option 4 ID : 6306801498633
Status : Answered
Chosen Option : 2

Q.7 The "Pradhan Mantri Jan Dhan Yojana" (PMJDY) aims at promoting financial inclusion. Under this scheme, what type of bank account is provided to individuals?

- Ans ☐ 1. Recurring Deposit Account
- ☐ 2. Fixed Deposit Account
- ☐ 3. Current Account
- ☒ 4. Savings Bank Account

Question ID : 630680384188
Option 1 ID : 6306801497644
Option 2 ID : 6306801497643
Option 3 ID : 6306801497642
Option 4 ID : 6306801497645
Status : Answered
Chosen Option : 4

Q.8 In which of the following states in India is the Ganga Dussehra celebrated?

- Ans ☐ 1. Uttar Pradesh
- ☐ 2. Rajasthan
- ☐ 3. Gujrat
- ☒ 4. Uttarakhand

Question ID : 630680384271
Option 1 ID : 6306801497971
Option 2 ID : 6306801497973
Option 3 ID : 6306801497970
Option 4 ID : 6306801497972
Status : Answered
Chosen Option : 1

Q.9 Which firm has unveiled India's first hand held navigation device based on Indian Regional Navigation Satellite System?

- Ans ☒ 1. Elena Geo Systems
- ☒ 2. Mphasis
- ☒ 3. Tech Mahindra
- ☒ 4. Informatics

Question ID : 630680386391
Option 1 ID : 6306801506276
Option 2 ID : 6306801506274
Option 3 ID : 6306801506277
Option 4 ID : 6306801506275
Status : Not Answered
Chosen Option : --

Q.10 "Harmandir Sahib," a famous religious site of the Sikhs, is located in which city?

- Ans ☒ 1. Patiala
- ☒ 2. Jalandhar
- ☒ 3. Ludhiana
- ☒ 4. Amritsar

Question ID : 630680384214
Option 1 ID : 6306801497746
Option 2 ID : 6306801497747
Option 3 ID : 6306801497748
Option 4 ID : 6306801497749
Status : Answered
Chosen Option : 4

Q.11 Who has served as Isro Chief from Jan. 2018 to Jan. 2022?

- Ans ☒ 1. A.S. Kirar Kumar
- ☒ 2. Dr. Shailesh Nayak
- ☒ 3. S. Somnath
- ☒ 4. Dr. K. Sivan

Question ID : 630680384376
Option 1 ID : 6306801498391
Option 2 ID : 6306801498390
Option 3 ID : 6306801498392
Option 4 ID : 6306801498393
Status : Answered
Chosen Option : 4

Q.12 Which mountain range forms the northern border of India?

- Ans ☒ 1. Western Ghats
- ☒ 2. Eastern Ghats
- ☒ 3. Himalayas
- ☒ 4. Aravalli Range

Question ID : 630680386455
Option 1 ID : 6306801506530
Option 2 ID : 6306801506532
Option 3 ID : 6306801506531
Option 4 ID : 6306801506533
Status : Answered
Chosen Option : 3

Q.13 "The God of Small Things" won the Booker Prize in 1997. Who is the author of this book?

- Ans
- ☐ 1. Vikram Seth
 - ☐ 2. Salman Rushdie
 - ☐ 3. Jhumpa Lahiri
 - ☒ 4. Arundhati Roy

Question ID : 630680384160
Option 1 ID : 6306801497533
Option 2 ID : 6306801497531
Option 3 ID : 6306801497532
Option 4 ID : 6306801497530
Status : Answered
Chosen Option : 4

Q.14 Who among the following is the author of "The God of Small Things"?

- Ans
- ☒ 1. Arundhati Roy
 - ☐ 2. Sandhya Menon
 - ☐ 3. Jhumpa Lahiri
 - ☐ 4. Amulya Malladi

Question ID : 630680384265
Option 1 ID : 6306801497947
Option 2 ID : 6306801497948
Option 3 ID : 6306801497949
Option 4 ID : 6306801497946
Status : Answered
Chosen Option : 1

Q.15 Which festival is known as the Festival of Lights and is celebrated across India with the lighting of lamps, fireworks, and exchanging of sweets?

- Ans
- ☒ 1. Diwali
 - ☐ 2. Navratri
 - ☐ 3. Holi
 - ☐ 4. Durga Puja

Question ID : 630680386429
Option 1 ID : 6306801506426
Option 2 ID : 6306801506429
Option 3 ID : 6306801506427
Option 4 ID : 6306801506428
Status : Answered
Chosen Option : 1

Q.16 Who was the prominent leader of the Satyagraha movement and played a crucial role in India's struggle for independence?

- Ans
- ☐ 1. Bhagat Singh
 - ☐ 2. Jawaharlal Nehru
 - ☐ 3. Subhash Chandra Bose
 - ☒ 4. Mahatma Gandhi

Question ID : 630680386486
Option 1 ID : 6306801506657
Option 2 ID : 6306801506655
Option 3 ID : 6306801506656
Option 4 ID : 6306801506654
Status : Answered
Chosen Option : 4

Q.17 In which of the following states was the Khelo India Youth Games held in India?

- Ans ☒ 1. Assam
☒ 2. Gujrat
☒ 3. Rajasthan
☒ 4. Madhya Pradesh

Question ID : 630680384262
Option 1 ID : 6306801497934
Option 2 ID : 6306801497937
Option 3 ID : 6306801497935
Option 4 ID : 6306801497936
Status : Answered
Chosen Option : 2

Q.18 In which year was the Gender Inequality Index (GII) introduced in India?

- Ans ☒ 1. 2013
☒ 2. 2000
☒ 3. 2014
☒ 4. 2010

Question ID : 630680384302
Option 1 ID : 6306801498096
Option 2 ID : 6306801498094
Option 3 ID : 6306801498097
Option 4 ID : 6306801498095
Status : Not Answered
Chosen Option : --

Q.19 What is the name of the book published in November 2022 on English Cricketer Mark Wood?

- Ans ☒ 1. Cricket in Woods
☒ 2. Surviving Cricket
☒ 3. The Wood Life
☒ 4. Life in Woods

Question ID : 630680386408
Option 1 ID : 6306801506345
Option 2 ID : 6306801506343
Option 3 ID : 6306801506344
Option 4 ID : 6306801506342
Status : Not Answered
Chosen Option : --

Q.20 Which of the following initiatives is taken by the Government of India to provide five year fellowships in the form of financial assistance to students from six notified minority communities viz. Buddhist, Christian, Jain, Muslim, Parsi and Sikh, notified by the Central Government, to pursue M. Phil and Ph.D?

- Ans
- ☒ 1. Nai Udaan
 - ☒ 2. Nai Roshni
 - ☒ 3. Naya Savera
 - ☒ 4. Maulana Azad National Fellowship Scheme (MANF)

Question ID : 630680384254
Option 1 ID : 6306801497905
Option 2 ID : 6306801497904
Option 3 ID : 6306801497902
Option 4 ID : 6306801497903
Status : Not Answered
Chosen Option : --

Q.21 "Indifference Curve" is a graphical representation used to analyze consumer preferences. The slope of the indifference curve represents:

- Ans
- ☒ 1. Average Utility
 - ☒ 2. Total Utility
 - ☒ 3. Opportunity Cost
 - ☒ 4. Marginal Rate of Substitution

Question ID : 630680384186
Option 1 ID : 6306801497636
Option 2 ID : 6306801497635
Option 3 ID : 6306801497637
Option 4 ID : 6306801497634
Status : Not Answered
Chosen Option : --

Q.22 How many classical languages are there in India?

- Ans
- ☒ 1. Fifteen
 - ☒ 2. Six
 - ☒ 3. Five
 - ☒ 4. Ten

Question ID : 630680384075
Option 1 ID : 6306801497190
Option 2 ID : 6306801497191
Option 3 ID : 6306801497192
Option 4 ID : 6306801497193
Status : Answered
Chosen Option : 1

Q.23 Which social issue got banned in India?

- Ans
- ☐ 1. Poverty
 - ☐ 2. Gender Gap
 - ☐ 3. Same Sex Marriage
 - ☒ 4. Triple Talaq

Question ID : 630680386400
Option 1 ID : 6306801506312
Option 2 ID : 6306801506311
Option 3 ID : 6306801506313
Option 4 ID : 6306801506310
Status : Answered
Chosen Option : 4

Q.24 Which Mughal emperor built the famous Taj Mahal as a mausoleum for his beloved wife, Mumtaz Mahal?

- Ans
- ☐ 1. Aurangzeb
 - ☐ 2. Akbar the Great
 - ☐ 3. Jahangir
 - ☒ 4. Shah Jahan

Question ID : 630680384435
Option 1 ID : 6306801498629
Option 2 ID : 6306801498626
Option 3 ID : 6306801498627
Option 4 ID : 6306801498628
Status : Answered
Chosen Option : 4

Q.25 The "Adult Literacy Rate" measures the percentage of the population aged 15 years and above who can read and write. According to the 2011 census, what was the approximate adult literacy rate in India?

- Ans
- ☐ 1. 64
 - ☒ 2. 74
 - ☐ 3. 54
 - ☐ 4. 84

Question ID : 630680384209
Option 1 ID : 6306801497726
Option 2 ID : 6306801497727
Option 3 ID : 6306801497729
Option 4 ID : 6306801497728
Status : Answered
Chosen Option : 2

Section : Quantitative Aptitude

Q.1 Out of his total income, Vivek spends 16% on house rent and 75% of the rest on household expenses. If he saves ₹ 2583 what is his total income (in rupees)?

- Ans**
- ✓ 1. ₹12300
 - ✗ 2. ₹ 12590
 - ✗ 3. ₹ 13560
 - ✗ 4. ₹ 14595

Question ID : 630680385003
Option 1 ID : 6306801500898
Option 2 ID : 6306801500900
Option 3 ID : 6306801500899
Option 4 ID : 6306801500901
Status : Answered
Chosen Option : 1

Q.2 Simplify:

$$\frac{(666 \times 666 \times 666) + (634 \times 634 \times 634)}{(666 \times 666) - (666 \times 634) + (634 \times 634)} \times \frac{1}{(81-56)}$$

- Ans**
- ✓ 1. 52
 - ✗ 2. 36
 - ✗ 3. 48
 - ✗ 4. 24

Question ID : 630680384948
Option 1 ID : 6306801500681
Option 2 ID : 6306801500679
Option 3 ID : 6306801500680
Option 4 ID : 6306801500678
Status : Answered
Chosen Option : 1

Q.3 There are 30 students in a class. Two students of weight 20 kg each left the class and a new student joins. The average weight of the class is decreased by $\frac{1}{3}$ kg. Find the weight of the new student.

- Ans**
- ✗ 1. 33 kg
 - ✗ 2. 44 kg
 - ✓ 3. 30 kg
 - ✗ 4. 22 kg

Question ID : 630680384867
Option 1 ID : 6306801500355
Option 2 ID : 6306801500357
Option 3 ID : 6306801500356
Option 4 ID : 6306801500354
Status : Answered
Chosen Option : 3

Q.4 Ranjan sold a chair at a loss of 40%. If he had sold it for ₹160 more, he would have made a profit of 40%. The cost price of the chair is:

- Ans** ☒ 1. ₹200
☐ 2. ₹100
☐ 3. ₹50
☐ 4. ₹150

Question ID : 630680385023
Option 1 ID : 6306801500981
Option 2 ID : 6306801500979
Option 3 ID : 6306801500978
Option 4 ID : 6306801500980
Status : Answered
Chosen Option : 1

Q.5 The area of a sector of a circle of radius 18 cm is 90π cm². The length of the corresponding arc of the sector is _____.

- Ans** ☐ 1. 9.5π cm
☐ 2. 7.5π cm
☐ 3. 12π cm
☒ 4. 10π cm

Question ID : 630680385825
Option 1 ID : 6306801504019
Option 2 ID : 6306801504018
Option 3 ID : 6306801504021
Option 4 ID : 6306801504020
Status : Answered
Chosen Option : 4

Q.6 A shopkeeper marks his good 15% above the cost price and offers a certain discount on it. If the profit % obtained by the shopkeeper is 10%, find the discount percentage offered (approximate value).

- Ans** ☐ 1. 3.21%
☐ 2. 7.29%
☒ 3. 4.35%
☐ 4. 6.15%

Question ID : 630680385189
Option 1 ID : 6306801501643
Option 2 ID : 6306801501642
Option 3 ID : 6306801501645
Option 4 ID : 6306801501644
Status : Answered
Chosen Option : 3

Q.7

Find the value of $2 \sin^2 A + \tan^2 A + \left(\frac{2}{\sec^2 A}\right) - \sec^2 A$

- Ans
- ☐ 1. 2
 - ☐ 2. 0
 - ☐ 3. 3
 - ☒ 4. 1

Question ID : 630680385209

Option 1 ID : 6306801501725

Option 2 ID : 6306801501724

Option 3 ID : 6306801501722

Option 4 ID : 6306801501723

Status : Answered

Chosen Option : 4

Q.8 Pipe S can fill a tank in 2 hours and pipe T can fill a tank in 6 hours. At 6 P.M pipe S was opened. At what time will the tank be filled if pipe T is opened at 7 P.M.?

- Ans
- ☐ 1. 8:00 p.m.
 - ☒ 2. 7:45 p.m.
 - ☐ 3. 8:15 p.m.
 - ☐ 4. 7:30 p.m.

Question ID : 630680385041

Option 1 ID : 6306801501052

Option 2 ID : 6306801501051

Option 3 ID : 6306801501053

Option 4 ID : 6306801501050

Status : Answered

Chosen Option : 2

Q.9 The sum of all interior angles of a regular polygon is four times the sum of all its exterior angles. The number of sides of the polygon is _____.

- Ans
- ☐ 1. 12
 - ☐ 2. 8
 - ☒ 3. 10
 - ☐ 4. 6

Question ID : 630680385015

Option 1 ID : 6306801500949

Option 2 ID : 6306801500947

Option 3 ID : 6306801500948

Option 4 ID : 6306801500946

Status : Answered

Chosen Option : 3

Q.10 The income of Akshay, Lakshman, and Akash in the ratio of 8 : 9 : 7 and their spendings are in the ratio 15 : 9 : 8. If Akshay saves 25% of his income. What is the ratio of the savings of Akshay, Lakshman and Akash?

- Ans** ☒ 1. 10 : 27 : 19
☒ 2. 27 : 10 : 19
☒ 3. 10 : 19 : 27
☒ 4. 27 : 19 : 10

Question ID : 630680385035
Option 1 ID : 6306801501029
Option 2 ID : 6306801501027
Option 3 ID : 6306801501026
Option 4 ID : 6306801501028
Status : Answered
Chosen Option : 1

Q.11 Solve:

$$\frac{(875 + 269)^2 + (875 - 269)^2}{(875 \times 875) + (269 \times 269)}$$

- Ans** ☒ 1. 0
☒ 2. 1
☒ 3. 2
☒ 4. -1

Question ID : 630680384950
Option 1 ID : 6306801500687
Option 2 ID : 6306801500688
Option 3 ID : 6306801500689
Option 4 ID : 6306801500686
Status : Answered
Chosen Option : 3

Q.12 Find the sum of exterior angles of a polygon of 13 sides.

- Ans** ☒ 1. 1320°
☒ 2. 1080°
☒ 3. 360°
☒ 4. 720°

Question ID : 630680384916
Option 1 ID : 6306801500553
Option 2 ID : 6306801500550
Option 3 ID : 6306801500552
Option 4 ID : 6306801500551
Status : Answered
Chosen Option : 3

Q.13 Ram , Keshav and Vishal have apples in the ratio of 12 : 15 : 25. If the sum of these apples is 364, find the ratio between the difference of apples of Keshav and Ram to the difference of apples between Vishal and Keshav.

- Ans**
- ☒ 1. 10 : 3
 - ☒ 2. 3 : 5
 - ☒ 3. 5 : 3
 - ☒ 4. 3 : 10

Question ID : 630680385030
Option 1 ID : 6306801501006
Option 2 ID : 6306801501009
Option 3 ID : 6306801501008
Option 4 ID : 6306801501007
Status : Answered
Chosen Option : 4

Q.14 The area of the rectangle is 1176 sq.cm. The perimeter and the breadth of a rectangle are in the ratio of 7:3. Find the length of the rectangle. (Take $\pi = \frac{22}{7}$)

- Ans**
- ☒ 1. 14 cm
 - ☒ 2. 11 cm
 - ☒ 3. 13 cm
 - ☒ 4. 15 cm

Question ID : 630680384976
Option 1 ID : 6306801500792
Option 2 ID : 6306801500790
Option 3 ID : 6306801500791
Option 4 ID : 6306801500793
Status : Answered
Chosen Option : 1

Q.15 Which smallest number must be added to 1114 so that the resulting number is completely divisible by 13.

- Ans**
- ☒ 1. 4
 - ☒ 2. 6
 - ☒ 3. 8
 - ☒ 4. 2

Question ID : 630680384896
Option 1 ID : 6306801500471
Option 2 ID : 6306801500470
Option 3 ID : 6306801500473
Option 4 ID : 6306801500472
Status : Answered
Chosen Option : 1

Q.16 Arrange the following in ascending order.

$$\frac{4}{5}, \frac{7}{8}, \frac{6}{7}, \frac{5}{6}$$

Ans

✓ 1. $\frac{4}{5}, \frac{5}{6}, \frac{6}{7}, \frac{7}{8}$

✗ 2. $\frac{7}{8}, \frac{5}{6}, \frac{6}{7}, \frac{4}{5}$

✗ 3. $\frac{4}{5}, \frac{5}{6}, \frac{6}{7}, \frac{4}{5}$

✗ 4. $\frac{5}{6}, \frac{4}{5}, \frac{6}{7}, \frac{7}{8}$

Question ID : 630680384993

Option 1 ID : 6306801500858

Option 2 ID : 6306801500861

Option 3 ID : 6306801500860

Option 4 ID : 6306801500859

Status : Answered

Chosen Option : 1

Q.17 If the surface area of a sphere is $900\pi \text{ cm}^2$, then find the volume of the sphere.

Ans

✗ 1. $3600\pi \text{ cm}^3$

✗ 2. $3900\pi \text{ cm}^3$

✓ 3. $4500\pi \text{ cm}^3$

✗ 4. $4200\pi \text{ cm}^3$

Question ID : 630680384880

Option 1 ID : 6306801500406

Option 2 ID : 6306801500408

Option 3 ID : 6306801500407

Option 4 ID : 6306801500409

Status : Answered

Chosen Option : 3

Q.18 If Ramesh's salary is 12% more than Dinesh's salary, then Dinesh's salary is how much percent less than Ramesh's salary?

Ans

✗ 1. 11.3%

✗ 2. 12%

✗ 3. 15%

✓ 4. 10.7%

Question ID : 630680385164

Option 1 ID : 6306801501542

Option 2 ID : 6306801501543

Option 3 ID : 6306801501545

Option 4 ID : 6306801501544

Status : Answered

Chosen Option : 4

Q.19 Pipe A can empty a cistern in 25 minutes and pipe B can fill it in 10 minutes. Find the time taken to fill an empty cistern if both pipes are opened together.

- Ans
- ☒ 1. 15 minutes
 - ☒ 2. $\frac{50}{3}$ minutes
 - ☒ 3. 22 minutes
 - ☒ 4. $\frac{83}{7}$ minutes

Question ID : 630680385201

Option 1 ID : 6306801501693

Option 2 ID : 6306801501691

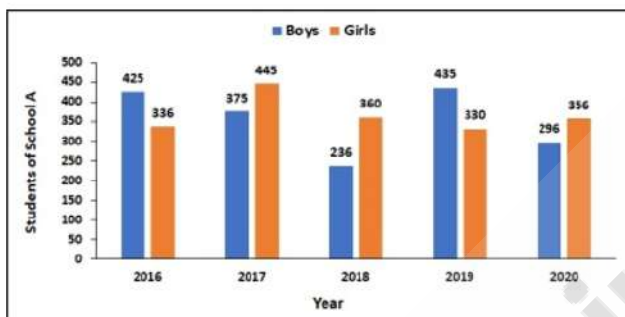
Option 3 ID : 6306801501690

Option 4 ID : 6306801501692

Status : Answered

Chosen Option : 2

Q.20 Given bar graph shows number of students (i.e. boys and girls) of school A in different years. Find the approximate percentage increase in number of students from 2018 to 2019?



- Ans
- ☒ 1. 23.5%
 - ☒ 2. 35%
 - ☒ 3. 28.36%
 - ☒ 4. 45.57%

Question ID : 630680384971

Option 1 ID : 6306801500770

Option 2 ID : 6306801500772

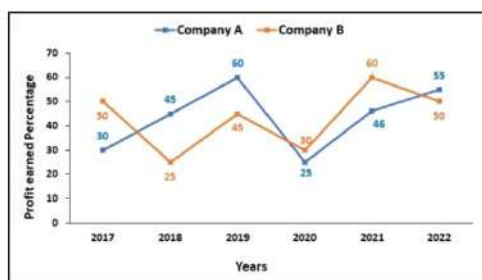
Option 3 ID : 6306801500771

Option 4 ID : 6306801500773

Status : Answered

Chosen Option : 3

- Q.21** Percent Profit earned by two companies producing mechanical equipments from the year 2017 to 2022. Company A invested ₹16,000 more than company B in the year 2020. The profit earned by B was ₹ 6200 more than A. Find the ratio of investment by the companies A and B in the year 2020.



- Ans ☒ 1. 63 : 61
☒ 2. 57 : 55
☒ 3. 55 : 51
☒ 4. 62 : 63

Question ID : 630680384974

Option 1 ID : 6306801500785

Option 2 ID : 6306801500784

Option 3 ID : 6306801500782

Option 4 ID : 6306801500783

Status : Not Attempted and Marked For Review

Chosen Option : --

- Q.22** A room has a length of 6m, breadth of 6m and a height of 7m. Find the length of the longest pole that can be placed in the room.

- Ans ☒ 1. 8 m
☒ 2. 11 m
☒ 3. 13 m
☒ 4. 10 m

Question ID : 630680384989

Option 1 ID : 6306801500842

Option 2 ID : 6306801500844

Option 3 ID : 6306801500845

Option 4 ID : 6306801500843

Status : Answered

Chosen Option : 2

- Q.23** Simran travels at the speed of 24 km/hr, 12 km/hr and 20 km/hr for three equal distances. What is his average speed if the total distance travelled by him is 360 km?

- Ans ☒ 1. 16.66 km/hr
☒ 2. 17.14 km/hr
☒ 3. 18.2 km/hr
☒ 4. 19.5 km/hr

Question ID : 630680384865

Option 1 ID : 6306801500346

Option 2 ID : 6306801500348

Option 3 ID : 6306801500347

Option 4 ID : 6306801500349

Status : Answered

Chosen Option : 2

Q.24 The radii of the bases of a cylinder and a cone are in the ratio 5 : 8 and their heights are in the ratio 4 : 3. Find the ratio of their volumes.

- Ans
- ☒ 1. 10 : 16
 - ☒ 2. 4 : 5
 - ☒ 3. 5 : 8
 - ☒ 4. 25 : 16

Question ID : 630680384981
Option 1 ID : 6306801500812
Option 2 ID : 6306801500810
Option 3 ID : 6306801500811
Option 4 ID : 6306801500813
Status : Answered
Chosen Option : 4

Q.25 if $m + \frac{1}{m} = 9$, find the value of $m^4 + \left(\frac{1}{m^4}\right)$.

- Ans
- ☒ 1. 56891
 - ☒ 2. 6239
 - ☒ 3. 79
 - ☒ 4. 729

Question ID : 630680385121
Option 1 ID : 6306801501370
Option 2 ID : 6306801501371
Option 3 ID : 6306801501372
Option 4 ID : 6306801501373
Status : Answered
Chosen Option : 2

Section : English Comprehension

Q.1 Fill in the blank with the most appropriate option.
If the Queen was to find it out about this, we should all have our heads _____, you know.

- Ans
- ☒ 1. chop up
 - ☒ 2. cut down
 - ☒ 3. slice down
 - ☒ 4. cut off

Question ID : 630680385340
Option 1 ID : 6306801502211
Option 2 ID : 6306801502210
Option 3 ID : 6306801502212
Option 4 ID : 6306801502213
Status : Answered
Chosen Option : 2

Q.2 The sentences given below are all part of a paragraph but do not necessarily fall in the order that they are in. The first and the last sentences of the paragraph are given. Choose the option that arranges these sentences to form a meaningful paragraph.
After three quarters of an hour, they reached the height
A. the hut stood three old fir-trees with great shaggy
B. exposed to every wind, but bathed in the full sunlight.
C. where the hut of the old man stood on a prominent rock,
D. From there you could gaze far down into the valley. Behind branches. Further back the old grey rocks rose high and sheer.

- Ans ☒ 1. DBAC
☒ 2. BCDA
☒ 3. ADBC
☒ 4. CBDA

Question ID : 630680385586
Option 1 ID : 6306801503123
Option 2 ID : 6306801503124
Option 3 ID : 6306801503125
Option 4 ID : 6306801503122
Status : Answered
Chosen Option : 4

Q.3 The sentence given below contains an idiom. Identify the idiom and choose its correct meaning from the given options.
I had a close shave this morning when a trailer unexpectedly swerved into my lane.

- Ans ☒ 1. With much noise, excitement or commotion.
☒ 2. A narrow escape from a situation.
☒ 3. Repeating ourselves.
☒ 4. Very common, inexpensive.

Question ID : 630680385400
Option 1 ID : 6306801502432
Option 2 ID : 6306801502431
Option 3 ID : 6306801502430
Option 4 ID : 6306801502433
Status : Answered
Chosen Option : 2

Q.4 The sentences given below are all part of a paragraph but do not necessarily fall in the order that they are in. The first and the last sentences of the paragraph are given. Choose the option that arranges these sentences to form a meaningful paragraph.
It was Christmas Eve, and I had to stir the pudding for
A. made me think afresh of the man with the load on his leg),
B. and found the tendency of exercise to bring the bread-and butter
C. next day, with a copper-stick, from seven to eight by the
D. Dutch clock. I tried it with the load upon my leg (and that out at my ankle, quite unmanageable.

- Ans ☒ 1. DACB
☒ 2. ABCD
☒ 3. CDAB
☒ 4. BCDA

Question ID : 630680385356
Option 1 ID : 6306801502275
Option 2 ID : 6306801502274
Option 3 ID : 6306801502276
Option 4 ID : 6306801502277
Status : Answered
Chosen Option : 3

Q.5 Choose the word that is the antonym of the bracketed word in the sentence:
His (arrogant) behaviour during the meeting offended many of his colleagues.

- Ans ☒ 1. Proud
☒ 2. Modest
☒ 3. Blatant
☒ 4. Confident

Question ID : 630680385524
Option 1 ID : 6306801502892
Option 2 ID : 6306801502891
Option 3 ID : 6306801502893
Option 4 ID : 6306801502890
Status : Answered
Chosen Option : 2

Q.6 Choose the correct word to complete the sentence:
The author spent months crafting the novel, carefully weaving together intricate plotlines. The book received critical acclaim and even caught the attention of _____.

- Ans ☒ 1. an elusive figure lurking in the shadows of the literary world.
☒ 2. an enigmatic book club known for promoting undiscovered authors.
☒ 3. a renowned literary agent from a top publishing house.
☒ 4. a group of dedicated fans who started a fan website for the book.

Question ID : 630680385254
Option 1 ID : 6306801501903
Option 2 ID : 6306801501904
Option 3 ID : 6306801501902
Option 4 ID : 6306801501905
Status : Answered
Chosen Option : 2

Q.7 From the options select the most suitable proverb for the sentence given below.
It is difficult to advice a person on a matter he is expert at, because he thinks he knows best.

- Ans ☒ 1. Fools rush in where angels fear to tread.
☒ 2. God helps those who help themselves.
☒ 3. Don't bite the hand that feeds you.
☒ 4. Doctors make the worst patients.

Question ID : 630680385405
Option 1 ID : 6306801502451
Option 2 ID : 6306801502453
Option 3 ID : 6306801502450
Option 4 ID : 6306801502452
Status : Answered
Chosen Option : 1

Q.8 Choose the positive question tag from the options given below:
Sarah plays the piano quite well, _____

- Ans ☒ 1. doesn't she?
 ☐ 2. isn't she?
 ☐ 3. doesn't it?
 ☐ 4. won't she?

Question ID : 630680385687
Option 1 ID : 6306801503490
Option 2 ID : 6306801503491
Option 3 ID : 6306801503493
Option 4 ID : 6306801503492
Status : Answered
Chosen Option : 1

Comprehension:

Based on the following cloze passage answer the question given below:

Effective teamwork is essential for achieving common goals and fostering a positive work environment. It requires (1) _____, communication, and collaboration among team members.

To build strong teamwork, it is important to establish clear (2) _____ and roles within the team. This helps in avoiding confusion and ensuring everyone knows their responsibilities. Additionally, fostering a culture of trust, respect, and (3) _____ contributes to a supportive and cohesive team dynamic.

SubQuestion No : 9

Q.9 Fill in the blank (3) with the appropriate word from the options below:

- Ans ☐ 1. collaboration
 ☐ 2. apathy
 ☒ 3. empathy
 ☐ 4. diversity

Question ID : 630680385278
Option 1 ID : 6306801501981
Option 2 ID : 6306801501980
Option 3 ID : 6306801501978
Option 4 ID : 6306801501979
Status : Answered
Chosen Option : 3

Comprehension:

Based on the following cloze passage answer the question given below:

Effective teamwork is essential for achieving common goals and fostering a positive work environment. It requires (1) _____, communication, and collaboration among team members.

To build strong teamwork, it is important to establish clear (2) _____ and roles within the team. This helps in avoiding confusion and ensuring everyone knows their responsibilities. Additionally, fostering a culture of trust, respect, and (3) _____ contributes to a supportive and cohesive team dynamic.

SubQuestion No : 10

Q.10 Fill in the blank (2) with the appropriate word from the options below:

- Ans ☒ 1. limitations
 ☒ 2. boundaries
 ☒ 3. objectives
 ☒ 4. expat

Question ID : 630680385277
Option 1 ID : 6306801501977
Option 2 ID : 6306801501975
Option 3 ID : 6306801501974
Option 4 ID : 6306801501976
Status : Answered
Chosen Option : 3

Comprehension:

Based on the following cloze passage answer the question given below:

Effective teamwork is essential for achieving common goals and fostering a positive work environment. It requires (1) _____, communication, and collaboration among team members.

To build strong teamwork, it is important to establish clear (2) _____ and roles within the team. This helps in avoiding confusion and ensuring everyone knows their responsibilities. Additionally, fostering a culture of trust, respect, and (3) _____ contributes to a supportive and cohesive team dynamic.

SubQuestion No : 11

Q.11 Fill in the blank (1) with the appropriate word from the options below:

- Ans ☒ 1. cooperation
 ☒ 2. competition
 ☒ 3. corroboration
 ☒ 4. conflict

Question ID : 630680385276
Option 1 ID : 6306801501973
Option 2 ID : 6306801501971
Option 3 ID : 6306801501970
Option 4 ID : 6306801501972
Status : Answered
Chosen Option : 1

Q.12 Select the most appropriate word for the given phrase.
A large building with an extensive floor area, typically for housing aircraft.

- Ans ☒ 1. Hangar
☒ 2. Airport
☒ 3. Sheath
☒ 4. Lair

Question ID : 630680385384
Option 1 ID : 6306801502369
Option 2 ID : 6306801502366
Option 3 ID : 6306801502368
Option 4 ID : 6306801502367
Status : Answered
Chosen Option : 1

Q.13 Select the most appropriate antonym of the given word.
Maladroit

- Ans ☒ 1. Athletic
☒ 2. Abusive
☒ 3. Diplomatic
☒ 4. Conservative

Question ID : 630680385648
Option 1 ID : 6306801503352
Option 2 ID : 6306801503353
Option 3 ID : 6306801503351
Option 4 ID : 6306801503350
Status : Not Attempted and Marked For Review
Chosen Option : --

Comprehension:

Read the given passage carefully and select the most appropriate answer to the questions that follow.

His voice faded off and Tom glanced impatiently around the garage. Then I heard footsteps on a stair and in a moment the thickish figure of a woman blocked out the light from the office door. She was in the middle thirties, and faintly stout, but she carried her surplus flesh sensuously as some women can. Her face, above a spotted dress of dark blue crepe-de-chine, contained no facet or gleam of beauty but there was an immediately perceptible vitality about her as if the nerves of her body were continually smouldering. She smiled slowly and walking through her husband as if he were a ghost shook hands with Tom, looking him flush in the eye. Then she wet her lips and without turning around spoke to her husband in a soft, coarse voice: 'Get some chairs, why don't you, so somebody can sit down.'

SubQuestion No : 14

Q.14 Which of the following statements is not true with respect to the passage.

- Ans ☒ 1. The woman was slim and beautiful.
☒ 2. Tom glanced impatiently around the garage.
☒ 3. The woman came down the stairs.
☒ 4. The woman walked by her husband as if he weren't present there.

Question ID : 630680385426
Option 1 ID : 6306801502533
Option 2 ID : 6306801502532
Option 3 ID : 6306801502531
Option 4 ID : 6306801502530
Status : Answered
Chosen Option : 1

Comprehension:

Read the given passage carefully and select the most appropriate answer to the questions that follow.

His voice faded off and Tom glanced impatiently around the garage. Then I heard footsteps on a stair and in a moment the thickish figure of a woman blocked out the light from the office door. She was in the middle thirties, and faintly stout, but she carried her surplus flesh sensuously as some women can. Her face, above a spotted dress of dark blue crepe-de-chine, contained no facet or gleam of beauty but there was an immediately perceptible vitality about her as if the nerves of her body were continually smouldering. She smiled slowly and walking through her husband as if he were a ghost shook hands with Tom, looking him flush in the eye. Then she wet her lips and without turning around spoke to her husband in a soft, coarse voice: 'Get some chairs, why don't you, so somebody can sit down.'

SubQuestion No : 15

Q.15 From the given options, identify the suitable title for the passage.

- Ans
- ☒ 1. Unwanted Presence
 - ☒ 2. The Beautiful Woman
 - ☒ 3. The Unknown Woman
 - ☒ 4. The Ghost

Question ID : 630680385425

Option 1 ID : 6306801502527

Option 2 ID : 6306801502526

Option 3 ID : 6306801502528

Option 4 ID : 6306801502529

Status : Answered

Chosen Option : 1

Comprehension:

Read the given passage carefully and select the most appropriate answer to the questions that follow.

His voice faded off and Tom glanced impatiently around the garage. Then I heard footsteps on a stair and in a moment the thickish figure of a woman blocked out the light from the office door. She was in the middle thirties, and faintly stout, but she carried her surplus flesh sensuously as some women can. Her face, above a spotted dress of dark blue crepe-de-chine, contained no facet or gleam of beauty but there was an immediately perceptible vitality about her as if the nerves of her body were continually smouldering. She smiled slowly and walking through her husband as if he were a ghost shook hands with Tom, looking him flush in the eye. Then she wet her lips and without turning around spoke to her husband in a soft, coarse voice: 'Get some chairs, why don't you, so somebody can sit down.'

SubQuestion No : 16

Q.16 Select the options the most appropriate meaning of the bracketed word given in the sentence below.

'as if the nerves of her body were continually (smouldering).'

- Ans
- ☒ 1. tanning
 - ☒ 2. flaming
 - ☒ 3. freezing
 - ☒ 4. bored

Question ID : 630680385428

Option 1 ID : 6306801502539

Option 2 ID : 6306801502538

Option 3 ID : 6306801502541

Option 4 ID : 6306801502540

Status : Answered

Chosen Option : 2

Comprehension:

Read the given passage carefully and select the most appropriate answer to the questions that follow.

His voice faded off and Tom glanced impatiently around the garage. Then I heard footsteps on a stair and in a moment the thickish figure of a woman blocked out the light from the office door. She was in the middle thirties, and faintly stout, but she carried her surplus flesh sensuously as some women can. Her face, above a spotted dress of dark blue crepe-de-chine, contained no facet or gleam of beauty but there was an immediately perceptible vitality about her as if the nerves of her body were continually smouldering. She smiled slowly and walking through her husband as if he were a ghost shook hands with Tom, looking him flush in the eye. Then she wet her lips and without turning around spoke to her husband in a soft, coarse voice: 'Get some chairs, why don't you, so somebody can sit down.'

SubQuestion No : 17

Q.17 Identify the correct inference that can be drawn from the passage.

- Ans
- ☒ 1. The three people in the room were having tea.
 - ☒ 2. The woman brought chairs for more people to sit.
 - ☒ 3. The woman greeted Tom and asked her husband to get more chairs.
 - ☒ 4. There were only two people in the room, the lady, her husband.

Question ID : 630680385427
Option 1 ID : 6306801502536
Option 2 ID : 6306801502534
Option 3 ID : 6306801502535
Option 4 ID : 6306801502537
Status : Answered
Chosen Option : 4

Q.18 Select the most appropriate synonym of the given word.
Beseech

- Ans
- ☒ 1. Ask
 - ☒ 2. Aside
 - ☒ 3. Cruel
 - ☒ 4. Blessed

Question ID : 630680385418
Option 1 ID : 6306801502504
Option 2 ID : 6306801502505
Option 3 ID : 6306801502502
Option 4 ID : 6306801502503
Status : Not Answered
Chosen Option : --

Q.19 Fill in the blank with the most appropriate option
The sun was shining brightly overhead, casting a warm golden glow on the sandy beach. _____, people were scattered along the shoreline, enjoying the cool breeze and gentle waves.

- Ans
- ☒ 1. Consequently
 - ☒ 2. Nevertheless
 - ☒ 3. Likewise
 - ☒ 4. Additionally

Question ID : 630680385464
Option 1 ID : 6306801502673
Option 2 ID : 6306801502671
Option 3 ID : 6306801502670
Option 4 ID : 6306801502672
Status : Answered
Chosen Option : 1

Q.20 Select the word segment that substitutes (replaces) the bracketed word segment correctly and completes the sentence meaningfully. Select the option 'no correction required' if the sentence is correct as given.
They weren't happy, (and either of them had) touched the chicken or the ale - and yet they weren't unhappy either.

- Ans**
- ☒ 1. and neither of these have
 - ☒ 2. and either of these have
 - ☒ 3. No correction required
 - ☒ 4. and neither of them had

Question ID : 630680385389
Option 1 ID : 6306801502386
Option 2 ID : 6306801502388
Option 3 ID : 6306801502389
Option 4 ID : 6306801502387
Status : Answered
Chosen Option : 4

Q.21 Select the word from the options which is the same in meaning to the bracketed word given in the sentence below.
It's hard to think of it as being too (tragic), in that sense.

- Ans**
- ☒ 1. blessed
 - ☒ 2. appalling
 - ☒ 3. pertinent
 - ☒ 4. acceptable

Question ID : 630680385419
Option 1 ID : 6306801502506
Option 2 ID : 6306801502508
Option 3 ID : 6306801502509
Option 4 ID : 6306801502507
Status : Answered
Chosen Option : 3

Q.22 Select the word segment that substitutes (replaces) the bracketed word segment correctly and completes the sentence meaningfully. Select the option 'no correction required' if the sentence is correct as given.
As we walked across the moonlight gravel to the porch (he disposed the) situation in a few brisk phrases.

- Ans**
- ☒ 1. he dispose off the
 - ☒ 2. he disposed of the
 - ☒ 3. he disposed off the
 - ☒ 4. No correction required

Question ID : 630680385397
Option 1 ID : 6306801502420
Option 2 ID : 6306801502419
Option 3 ID : 6306801502418
Option 4 ID : 6306801502421
Status : Answered
Chosen Option : 3

Q.23 Fill in the blank with the most appropriate option.
But _____ I am wrong, perhaps it was not so?

- Ans ☒ 1. accordingly
☒ 2. perhaps
☒ 3. nevertheless
☒ 4. actually

Question ID : 630680385572
Option 1 ID : 6306801503069
Option 2 ID : 6306801503066
Option 3 ID : 6306801503068
Option 4 ID : 6306801503067
Status : Answered
Chosen Option : 4

Q.24 Arrange the following sentences in the correct order to form a coherent paragraph.

- A)She enrolled in a cooking class to enhance her culinary skills.
B)The enticing aroma of freshly baked bread filled the kitchen.
C)With each class, she gained confidence in her ability to create delicious meals.
D) She discovered her passion for cooking during a trip to Italy.
E) Her friends eagerly gathered at her house to savour her delectable creations.

- Ans ☒ 1. BDACE
☒ 2. CEDBA
☒ 3. DABCE
☒ 4. ABCDE

Question ID : 630680385245
Option 1 ID : 6306801501869
Option 2 ID : 6306801501868
Option 3 ID : 6306801501866
Option 4 ID : 6306801501867
Status : Answered
Chosen Option : 3

Q.25 Select the most appropriate word for the given phrase.
A closed political meeting.

- Ans ☒ 1. Caucus
☒ 2. Claque
☒ 3. Cortege
☒ 4. Hamlet

Question ID : 630680385388
Option 1 ID : 6306801502384
Option 2 ID : 6306801502382
Option 3 ID : 6306801502385
Option 4 ID : 6306801502383
Status : Answered
Chosen Option : 2