



# Teachingninja.in



**Latest Govt Job updates**



**Private Job updates**



**Free Mock tests available**



**Visit - [teachingninja.in](https://teachingninja.in)**

# **DSSSB Asst Grade-III**

**Previous Year Paper**  
**14 Feb, 2024 Shift 1**





GOVT. OF NCT OF DELHI  
Delhi Subordinate Services Selection Board  
FC-18, Institutional Area, Karkardooma, Delhi – 110092.  
[www.dsssb.delhigovt.nic.in](http://www.dsssb.delhigovt.nic.in)

Participant ID	
Participant Name	
Test Center Name	
Test Date	14/02/2024
Test Time	8:30 AM - 10:30 AM
Subject	ASSTT GR III

Section : General intelligence and Reasoning Ability 1

**Q.1** Priya, Kusum, Radha, Sonam and Tanu are five friends live on different floors but not necessarily in the same order. Kusum lives on the second floor from the top. Sonam lives below the floor of Kusum. Tanu lives between the floors of Radha and Sonam. Now, if Priya and Radha are at the top and bottom floors respectively, who lives in the middle floor?

- Ans**
- ☒ 1. Kusum
  - ☒ 2. Priya
  - ☒ 3. Sonam
  - ☒ 4. Radha

Question ID : 630680604017  
Option 1 ID : 6306802363527  
Option 2 ID : 6306802363526  
Option 3 ID : 6306802363525  
Option 4 ID : 6306802363524

**Q.2** Abhay, Badal, Chnadan, Dinesh, Elina, and Firoja are six persons live on different floors but not necessarily in the same order. Abhay and Elina are on the top and bottom floor respectively. Badal lives on the floor between Abhay and Chandan. Dinesh lives between the floors of Chandan and Firoja. Who lives on the third floor from the top?

- Ans**
- ☒ 1. Chandan
  - ☒ 2. Abhay
  - ☒ 3. Firoja
  - ☒ 4. Dinesh

Question ID : 630680604058  
Option 1 ID : 6306802363689  
Option 2 ID : 6306802363688  
Option 3 ID : 6306802363690  
Option 4 ID : 6306802363691

**Q.3** How many numbers will be left in the following series after deleting all symbols and letters?

8 T # 0 S 7 1 % 6 A ^ 8 K 4 @ S 9 ! P 3 # 2 G 1 G 1

- Ans**
- ☒ 1. 14
  - ☒ 2. 15
  - ☒ 3. 12
  - ☒ 4. 13

Question ID : 630680619931  
Option 1 ID : 6306802425807  
Option 2 ID : 6306802425808  
Option 3 ID : 6306802425805  
Option 4 ID : 6306802425806

**Q.4** Read the given statement(s) and conclusions carefully. Assuming that the information given in the statements is true, even if it appears to be at variance with commonly known facts, decide which of the given conclusions logically follow(s) from the statement(s).

Statements:

No duster is chalk.  
All chalks are coal.

Conclusions:

- 1. No coal is duster.
- 2. Some coal are duster.

- Ans**
- ☒ 1. Only conclusion 1 follows.
  - ☒ 2. Only conclusion 2 follows.
  - ☒ 3. Neither conclusion 1 nor 2 follows.
  - ☒ 4. Both conclusion 1 and 2 follow.

Question ID : 630680604108  
Option 1 ID : 6306802363888  
Option 2 ID : 6306802363889  
Option 3 ID : 6306802363890  
Option 4 ID : 6306802363891

**Q.5** In a certain code language, SOUR is written as 73 and SWEET is written as 72. How SALTY will be written in the same code language?

- Ans**
- ☒ 1. 74
  - ☒ 2. 72
  - ☒ 3. 76
  - ☒ 4. 77

Question ID : 630680604104  
Option 1 ID : 6306802363872  
Option 2 ID : 6306802363873  
Option 3 ID : 6306802363875  
Option 4 ID : 6306802363874



**Q.6** Read the given statement(s) and conclusions carefully. Assuming that the information given in the statements is true, even if it appears to be at variance with commonly known facts, decide which of the given conclusions logically follow(s) from the statement(s).

Statements:

Some Animals are Bear.  
Some Cats are Animals.

Conclusions:

1. Some Cats are Bear.
2. Some Bear are Animals.

**Ans** ☒ 1. Only 1 conclusion follows.  
☒ 2. Both conclusion 1 and 2 follow.  
☒ 3. Only 2 conclusion follows.  
☒ 4. Neither conclusion 1 nor 2 follows.

Question ID : 630680619951  
Option 1 ID : 6306802426337  
Option 2 ID : 6306802426340  
Option 3 ID : 6306802426338  
Option 4 ID : 6306802426339

**Q.7** How is the father of A's father's wife's daughter related to A?

**Ans** ☒ 1. Father  
☒ 2. Son  
☒ 3. Grandfather  
☒ 4. Brother

Question ID : 630680604025  
Option 1 ID : 6306802363556  
Option 2 ID : 6306802363559  
Option 3 ID : 6306802363558  
Option 4 ID : 6306802363557

**Q.8** How many such symbols are there in the following series each of which is immediately followed by a number?

8 T # 0 \$ 7 1 % 6 A ^ 8 K 4 @ S 9 ! P 3 # 2 G 1 G 1

**Ans** ☒ 1. 3  
☒ 2. 3  
☒ 3. 5  
☒ 4. 4

Question ID : 630680604021  
Option 1 ID : 6306802363543  
Option 2 ID : 6306802363540  
Option 3 ID : 6306802363542  
Option 4 ID : 6306802363541

Q.9 How many such numbers are there in the following series each of which is immediately succeeded by a symbol?

B 6 # F @ 6 G @ D @ 9 H @ B N # F 2 # J % K 9

- Ans
- ☒ 1. 2
  - ☐ 2. 1
  - ☐ 3. 0
  - ☐ 4. 3

Question ID : 630680604101  
Option 1 ID : 6306802363861  
Option 2 ID : 6306802363860  
Option 3 ID : 6306802363863  
Option 4 ID : 6306802363862

Q.10 How many such symbols are there in the given series each of which is immediately followed by a number?

F # 4 H % L 5 @ 7 # J 8 V % 4 F @ 1 ( K T

- Ans
- ☐ 1. 3
  - ☒ 2. 0
  - ☐ 3. 1
  - ☐ 4. 2

Question ID : 630680604259  
Option 1 ID : 6306802364494  
Option 2 ID : 6306802364495  
Option 3 ID : 6306802364492  
Option 4 ID : 6306802364493

Q.11 Which of the following options will replace the question mark on the basis of body parts and disease?

Intestine : Colitis :: Hair : ?

- Ans
- ☒ 1. Baldness
  - ☐ 2. Paralysis
  - ☐ 3. Glaucoma
  - ☐ 4. Eczema

Question ID : 630680604229  
Option 1 ID : 6306802364372  
Option 2 ID : 6306802364374  
Option 3 ID : 6306802364373  
Option 4 ID : 6306802364375

**Q.12** Five friends are sitting on a bench for a group photo. Sameer is sitting immediately to the left of Raja and immediately to the right of Vinay. Mala is sitting immediately to the right of Kajal. Kajal is sitting immediately between Raja and Mala. Who is sitting on the extreme right end side of the group photo?

- Ans**
- ☐ 1. Raja
  - ☐ 2. Sameer
  - ☐ 3. Kajal
  - ☒ 4. Mala

Question ID : 630680604014  
Option 1 ID : 6306802363514  
Option 2 ID : 6306802363515  
Option 3 ID : 6306802363512  
Option 4 ID : 6306802363513

**Q.13** How is the only daughter of Vishakha's brother's wife's mother-in-law related to Vishakha?

- Ans**
- ☐ 1. Sister in law
  - ☐ 2. Mother
  - ☐ 3. Sister
  - ☒ 4. Visakha her self

Question ID : 630680619943  
Option 1 ID : 6306802425856  
Option 2 ID : 6306802425855  
Option 3 ID : 6306802425854  
Option 4 ID : 6306802425853

**Q.14** Five men Vineet, Ramu, Shobhit, Narang and Madan are sitting in a row facing north. Shobhit is sitting immediately between Vineet and Ramu. Narang is sitting immediately between Ramu and Madan. Madan is sitting on the right end of the row. Who is sitting on the extreme left end of the row?

- Ans**
- ☐ 1. Narang
  - ☐ 2. Ramu
  - ☒ 3. Vineet
  - ☐ 4. Shobhit

Question ID : 630680604054  
Option 1 ID : 6306802363672  
Option 2 ID : 6306802363675  
Option 3 ID : 6306802363673  
Option 4 ID : 6306802363674

Q.15 If ROME is coded as SPNF and PARIS is coded as QBSJT, then What will be the code for GOA?

- Ans
- ☐ 1. PBH
  - ☐ 2. BPH
  - ☒ 3. HPB
  - ☐ 4. HBP

Question ID : 630680604023  
Option 1 ID : 6306802363551  
Option 2 ID : 6306802363548  
Option 3 ID : 6306802363550  
Option 4 ID : 6306802363549

Q.16 Based on the vegetables and their types, which of the following option is different from the other three options?

- Ans
- ☐ 1. Parsley
  - ☐ 2. Cabbage
  - ☐ 3. Lettuce
  - ☒ 4. Potato

Question ID : 630680604273  
Option 1 ID : 6306802364549  
Option 2 ID : 6306802364551  
Option 3 ID : 6306802364550  
Option 4 ID : 6306802364548

Q.17 Six men Amit, Vinit, Chandan, Daya, Neeraj, and Roshan are sitting in a row facing north. Chandan is sitting immediately between Amit and Neeraj. Vinit is sitting immediately to the right of Neeraj. Roshan is not sitting at the right end of the row. If Daya is sitting at the right end of the row, who is sitting on the immediate right of Amit in the row?

- Ans
- ☐ 1. Vinit
  - ☐ 2. Roshan
  - ☐ 3. Neeraj
  - ☒ 4. Chandan

Question ID : 630680604175  
Option 1 ID : 6306802364156  
Option 2 ID : 6306802364159  
Option 3 ID : 6306802364158  
Option 4 ID : 6306802364157

Q.18 Which of the following options will replace the question mark on the basis of states and folk dance?

Haryana : Phag :: Maharashtra : ?

- Ans
- ✗ 1. Bihu
  - ✗ 2. Gidda
  - ✗ 3. Garba
  - ✓ 4. Koli

Question ID : 630680604271  
Option 1 ID : 6306802364540  
Option 2 ID : 6306802364541  
Option 3 ID : 6306802364543  
Option 4 ID : 6306802364542

Q.19 Seema went to watch the movie 11 days ago. She goes to watch movies only on Thursday, what is the day of the week today?

- Ans
- ✗ 1. Saturday
  - ✗ 2. Thursday
  - ✓ 3. Monday
  - ✗ 4. Friday

Question ID : 630680604256  
Option 1 ID : 6306802364482  
Option 2 ID : 6306802364480  
Option 3 ID : 6306802364483  
Option 4 ID : 6306802364481


Q.20 Which of the following options will replace the question mark on the basis of body parts and disease?

Eye : Cataract :: Teeth : ?

- Ans
- ✗ 1. Rickets
  - ✗ 2. Eczema
  - ✗ 3. Glaucoma
  - ✓ 4. Pyorrhea

Question ID : 630680604029  
Option 1 ID : 6306802363575  
Option 2 ID : 6306802363572  
Option 3 ID : 6306802363573  
Option 4 ID : 6306802363574

Q.1 Find the figure which is different from the rest figure options given below.



1 2 3 4

- Ans ☒ 1. 2  
☐ 2. 1  
☐ 3. 3  
☐ 4. 4

Question ID : 630680604042  
Option 1 ID : 6306802363625  
Option 2 ID : 6306802363624  
Option 3 ID : 6306802363626  
Option 4 ID : 6306802363627

Q.2 If 'M' denotes ' $\times$ ', 'D' denotes '+', 'A' denotes ' $\div$ ', 'S' denotes ' $-$ ' Then what will be the value of the following expression?

68 S 18 D 3 A 35 M 3

- Ans ☐ 1. 168  
☐ 2. 166  
☐ 3. 165  
☒ 4. 167

Question ID : 630680619963  
Option 1 ID : 6306802426388  
Option 2 ID : 6306802426386  
Option 3 ID : 6306802426385  
Option 4 ID : 6306802426387

Q.3 If '+' means ' $-$ ', ' $\times$ ' means ' $\div$ ', ' $-$ ' means '+' and ' $\div$ ' means ' $\times$ ' then find out the answer of the following expression.

11 / 3 + 18 - 6 X 2

- Ans ☐ 1. 19  
☒ 2. 18  
☐ 3. 17  
☐ 4. 16

Question ID : 630680619942  
Option 1 ID : 6306802425852  
Option 2 ID : 6306802425851  
Option 3 ID : 6306802425850  
Option 4 ID : 6306802425849

Q.4 Which of the following option is similar to the expression given below?

$320 : 129 : 191$

- Ans ☒ 1.  $179 : 141 : 38$   
☐ 2.  $283 : 104 : 181$   
☐ 3.  $169 : 128 : 40$   
☐ 4.  $291 : 189 : 112$

Question ID : 630680604092  
Option 1 ID : 6306802363825  
Option 2 ID : 6306802363827  
Option 3 ID : 6306802363826  
Option 4 ID : 6306802363824

Q.5 Which of the following option is similar to the expression given below?

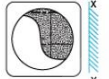
$38 : 26 : 12$

- Ans ☐ 1.  $19 : 12 : 4$   
☐ 2.  $17 : 11 : 7$   
☒ 3.  $91 : 79 : 12$   
☐ 4.  $23 : 12 : 10$

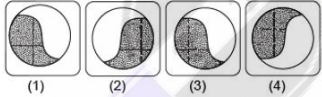
Question ID : 630680604050  
Option 1 ID : 6306802363658  
Option 2 ID : 6306802363657  
Option 3 ID : 6306802363656  
Option 4 ID : 6306802363659

Q.6 Which among the following option from the answer figures will be the mirror image of the question figure, when the mirror is held at XY?

Question figure:



Answer figures:



- Ans ☒ 1. 4  
☐ 2. 1  
☐ 3. 2  
☐ 4. 3

Question ID : 630680619934  
Option 1 ID : 6306802425820  
Option 2 ID : 6306802425817  
Option 3 ID : 6306802425818  
Option 4 ID : 6306802425819



Q.7 What will come in place of the question mark (?) to make the series given below logically complete?

6, 19, 17, 30, 28, ?, ?

- Ans
- ☐ 1. 26, 39
  - ☐ 2. 39, 26
  - ☒ 3. 41, 39
  - ☐ 4. 39, 41

Question ID : 630680604086  
Option 1 ID : 6306802363801  
Option 2 ID : 6306802363800  
Option 3 ID : 6306802363803  
Option 4 ID : 6306802363802

Q.8 What will be value of the following expression?

$$8.30 + 1.48 + 3.62 + 5.23 = ?$$

- Ans
- ☐ 1. 18.36
  - ☐ 2. 19.36
  - ☒ 3. 18.63
  - ☐ 4. 19.63

Question ID : 630680604128  
Option 1 ID : 6306802363968  
Option 2 ID : 6306802363971  
Option 3 ID : 6306802363969  
Option 4 ID : 6306802363970

Q.9 Based on the continent and its country, which of the following option is different from the other three options?

- Ans
- ☐ 1. Liechtenstein
  - ☒ 2. Laos
  - ☐ 3. Lithuania
  - ☐ 4. Latvia

Question ID : 630680604235  
Option 1 ID : 6306802364399  
Option 2 ID : 6306802364398  
Option 3 ID : 6306802364397  
Option 4 ID : 6306802364396



Q.10 Which of the following option is similar to the expression given below?

15 : 195

- Ans
- ✗ 1. 11 : 100
  - ✗ 2. 13 : 160
  - ✗ 3. 19 : 340
  - ✓ 4. 16 : 224

Question ID : 630680604212  
Option 1 ID : 6306802364304  
Option 2 ID : 6306802364305  
Option 3 ID : 6306802364307  
Option 4 ID : 6306802364306

Q.11 Which of the following option is similar to the expression given below?

46 : 4 : 184

- Ans
- ✗ 1. 30 : 6 : 170
  - ✗ 2. 40 : 5 : 190
  - ✗ 3. 19 : 7 : 120
  - ✓ 4. 47 : 5 : 235

Question ID : 630680604209  
Option 1 ID : 6306802364293  
Option 2 ID : 6306802364294  
Option 3 ID : 6306802364292  
Option 4 ID : 6306802364295

Q.12 Which among the following option from the answer figures will be the mirror image of the question figure, when the mirror is held at XY?

Question figure:  
EMOTION  
X Y

Answer figures:  
(1)EWOTIION (2)NOLLWE  
(3)NOILOWE (4)NOITOME

- Ans
- ✗ 1. 4
  - ✗ 2. 3
  - ✗ 3. 2
  - ✓ 4. 1

Question ID : 630680604159  
Option 1 ID : 6306802364095  
Option 2 ID : 6306802364094  
Option 3 ID : 6306802364093  
Option 4 ID : 6306802364092

Q.13 Based on the capital city and country, which of the following option is different from the other three options?

- Ans ☒ 1. Kanpur
- ☐ 2. Kathmandu
- ☐ 3. Tokyo
- ☐ 4. Dhaka

Question ID : 630680604115  
Option 1 ID : 6306802363916  
Option 2 ID : 6306802363919  
Option 3 ID : 6306802363917  
Option 4 ID : 6306802363918

Q.14 What will come in place of the question mark (?) to make the series given below logically complete?

55, 72, 63, 80, 71, ?,?

- Ans ☐ 1. 97, 114
- ☐ 2. 114, 97
- ☐ 3. 79, 88
- ☒ 4. 88, 79

Question ID : 630680604167  
Option 1 ID : 6306802364125  
Option 2 ID : 6306802364124  
Option 3 ID : 6306802364127  
Option 4 ID : 6306802364126

Q.15 If 'M' denotes '×', 'D' denotes '+', 'A' denotes '+', 'S' denotes '-' Then what will be the value of the following expression?

30 S 28 D 7 A 18 M 3

- Ans ☐ 1. 74
- ☐ 2. 60
- ☐ 3. 84
- ☒ 4. 80

Question ID : 630680604085  
Option 1 ID : 6306802363797  
Option 2 ID : 6306802363796  
Option 3 ID : 6306802363798  
Option 4 ID : 6306802363799

Q.16 What will come in the place of question mark (?) to make the series given below logically complete?

N 17, O 19, P 23, Q 29, R 31, ?

- Ans
- ✓ 1. S 37
  - ✗ 2. U 39
  - ✗ 3. R 37
  - ✗ 4. T 39

Question ID : 630680619933  
Option 1 ID : 6306802425814  
Option 2 ID : 6306802425816  
Option 3 ID : 6306802425813  
Option 4 ID : 6306802425815

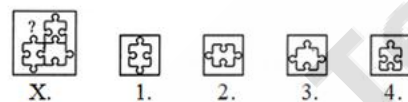
Q.17 What will come in the place of question mark (?) to make the series given below logically complete?

D 53, E 59, F 61, G 67, ??

- Ans
- ✗ 1. K 73
  - ✓ 2. H 71
  - ✗ 3. I 71
  - ✗ 4. J 73

Question ID : 630680604197  
Option 1 ID : 6306802364247  
Option 2 ID : 6306802364245  
Option 3 ID : 6306802364244  
Option 4 ID : 6306802364246

Q.18 Which of the following options will replace the question mark in the figure given below?



- Ans
- ✗ 1. 1
  - ✓ 2. 2
  - ✗ 3. 4
  - ✗ 4. 3

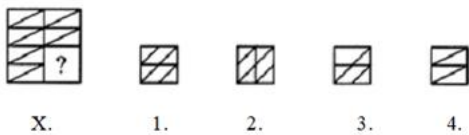
Question ID : 630680604038  
Option 1 ID : 6306802363608  
Option 2 ID : 6306802363609  
Option 3 ID : 6306802363611  
Option 4 ID : 6306802363610

Q.19 Based on the fruits and their types, which of the following option is different from the other three options?

- Ans
- ☐ 1. Pear
  - ☐ 2. Papaya
  - ☐ 3. Apple
  - ☒ 4. Marigold

Question ID : 630680604233  
Option 1 ID : 6306802364389  
Option 2 ID : 6306802364390  
Option 3 ID : 6306802364388  
Option 4 ID : 6306802364391

Q.20 Which of the following options will replace the question mark in the figure given below?



- Ans
- ☐ 1. 1
  - ☒ 2. 4
  - ☐ 3. 2
  - ☐ 4. 3

Question ID : 630680604278  
Option 1 ID : 6306802364568  
Option 2 ID : 6306802364571  
Option 3 ID : 6306802364569  
Option 4 ID : 6306802364570

Section : General Awareness 1

Q.1 In which of the following years the Appiko movement was started in Karnataka?

- Ans
- ☐ 1. 1985
  - ☒ 2. 1983
  - ☐ 3. 1984
  - ☐ 4. 1982

Question ID : 630680620002  
Option 1 ID : 6306802426008  
Option 2 ID : 6306802426006  
Option 3 ID : 6306802426007  
Option 4 ID : 6306802426005

Q.2 Purna Swaraj day was celebrated by Congress on which of the following date?

- Ans
- ☐ 1. 26 January, 1932
  - ☐ 2. 26 January, 1929
  - ☒ 3. 26 January, 1930
  - ☐ 4. 26 January, 1931

Question ID : 630680604405  
Option 1 ID : 6306802365083  
Option 2 ID : 6306802365080  
Option 3 ID : 6306802365081  
Option 4 ID : 6306802365082

Q.3 Who among the following was the founder of Delhi Sultanate?

- Ans
- ☒ 1. Qutub-ud-din aibak
  - ☐ 2. Babur
  - ☐ 3. Iltutmish
  - ☐ 4. Razia Sultan

Question ID : 630680604328  
Option 1 ID : 6306802364773  
Option 2 ID : 6306802364772  
Option 3 ID : 6306802364774  
Option 4 ID : 6306802364775

Q.4 By which of the following years has the Prime Minister TB Mukta Bharat Abhiyan been launched to eliminate TB?

- Ans
- ☐ 1. 2057
  - ☐ 2. 2027
  - ☐ 3. 2037
  - ☒ 4. 2025

Question ID : 630680604478  
Option 1 ID : 6306802365375  
Option 2 ID : 6306802365372  
Option 3 ID : 6306802365373  
Option 4 ID : 6306802365374

Q.5 Horticulture is related to the production of which of the following crops?

- Ans
- ☐ 1. Fish culture
  - ☒ 2. Production of fruits and vegetables
  - ☐ 3. Shrimp production
  - ☐ 4. Milk production

Question ID : 630680604363  
Option 1 ID : 6306802364913  
Option 2 ID : 6306802364912  
Option 3 ID : 6306802364914  
Option 4 ID : 6306802364915

Q.6 Every commercial bank is required to keep a certain proportion of its total deposits in the form of cash with the RBI. what's this called?

- Ans
- ☐ 1. Bank Ratio
  - ☐ 2. Statutory Liquidity Ratio (SLR)
  - ☐ 3. Legal Reserve Ratio (LRR)
  - ☒ 4. Cash Reserve Ratio (CRR)

Question ID : 630680619975  
Option 1 ID : 6306802425898  
Option 2 ID : 6306802425899  
Option 3 ID : 6306802425900  
Option 4 ID : 6306802425897

Q.7 At which of the following place, Gautam Buddha attained enlightenment?

- Ans
- ☐ 1. Sarnath
  - ☒ 2. Bodhgaya
  - ☐ 3. Kapilvastu
  - ☐ 4. Sanchi

Question ID : 630680604369  
Option 1 ID : 6306802364938  
Option 2 ID : 6306802364936  
Option 3 ID : 6306802364937  
Option 4 ID : 6306802364939

Q.8 Which of the following state has won a total of 228 medals in the 37th National Games held in the year 2023?

- Ans
- ☒ 1. Maharashtra
  - ☐ 2. Goa
  - ☐ 3. Sikkim
  - ☐ 4. Haryana

Question ID : 630680604512  
Option 1 ID : 6306802365509  
Option 2 ID : 6306802365511  
Option 3 ID : 6306802365510  
Option 4 ID : 6306802365508

Q.9 Who among the following propagated revival of Vedic Hinduism?

- Ans
- ☐ 1. Rammohan Roy
  - ☐ 2. Swami Vivekananda
  - ☒ 3. Dayanand Saraswati
  - ☐ 4. R N Tagore

Question ID : 630680604329  
Option 1 ID : 6306802364778  
Option 2 ID : 6306802364776  
Option 3 ID : 6306802364777  
Option 4 ID : 6306802364779

Q.10 When the Legal Reserve ratio is increased by RBI, the commercial bank's capacity to create deposits or credit \_\_\_\_\_.

- Ans
- ☒ 1. Remains the same
  - ☒ 2. First increases and then decreases
  - ☒ 3. Decreases
  - ☒ 4. Increases

Question ID : 630680604360  
Option 1 ID : 6306802364902  
Option 2 ID : 6306802364903  
Option 3 ID : 6306802364901  
Option 4 ID : 6306802364900

Q.11 Aditya L-1 is related to which of the following?

- Ans
- ☒ 1. Sun
  - ☒ 2. moon
  - ☒ 3. Earth
  - ☒ 4. Vesper

Question ID : 630680604513  
Option 1 ID : 6306802365512  
Option 2 ID : 6306802365514  
Option 3 ID : 6306802365513  
Option 4 ID : 6306802365515

Q.12 Who among the following finally eliminated 'Turkan-i-chahalgani'?

- Ans
- ☒ 1. Firoz Tughlaq
  - ☒ 2. Iltutmish
  - ☒ 3. Mohammad Bin Tughlaq
  - ☒ 4. Balban

Question ID : 630680604487  
Option 1 ID : 6306802365411  
Option 2 ID : 6306802365408  
Option 3 ID : 6306802365410  
Option 4 ID : 6306802365409

Q.13 What is PM-DevINE scheme?

- Ans
- ☒ 1. Development initiative for north eastern region
  - ☒ 2. Development initiative for northern states region
  - ☒ 3. Development initiative for southern region
  - ☒ 4. Development initiative for central Indian region

Question ID : 630680604555  
Option 1 ID : 6306802365680  
Option 2 ID : 6306802365682  
Option 3 ID : 6306802365683  
Option 4 ID : 6306802365681

Q.14 What is Bima Vahak scheme?

- Ans
- ☒ 1. Women centric agricultural insurance in the rural parts of India
  - ☒ 2. Women centric health security scheme in the rural parts of India
  - ☒ 3. Women centric insurance distribution channel in the rural parts of India
  - ☒ 4. Women centric insurance distribution channel in the urban parts of India

Question ID : 630680604397  
Option 1 ID : 6306802365050  
Option 2 ID : 6306802365049  
Option 3 ID : 6306802365048  
Option 4 ID : 6306802365051

Q.15 Who among the following established a Sanskrit college in Banaras in 1794?

- Ans
- ☒ 1. Jonathan Duncan
  - ☒ 2. Wareen Hatings
  - ☒ 3. William Bentick
  - ☒ 4. William Jones

Question ID : 630680604526  
Option 1 ID : 6306802365565  
Option 2 ID : 6306802365566  
Option 3 ID : 6306802365567  
Option 4 ID : 6306802365564

Q.16 Who among the following has composed the play "Bharat Durdasha"?

- Ans
- ☒ 1. Bhartendu Harish Chandra
  - ☒ 2. Dinabandhu Mitra
  - ☒ 3. Mahatma Gandhi
  - ☒ 4. Bankim Chandra Chatterjee

Question ID : 630680619993  
Option 1 ID : 6306802425971  
Option 2 ID : 6306802425969  
Option 3 ID : 6306802425972  
Option 4 ID : 6306802425970

Q.17 MISHTI scheme was launched by PM of Indian on which of the following day?

- Ans
- ☒ 1. 5 June 2023
  - ☒ 2. 16 September 2023
  - ☒ 3. 22 April 2023
  - ☒ 4. 22 March 2023

Question ID : 630680604436  
Option 1 ID : 6306802365204  
Option 2 ID : 6306802365207  
Option 3 ID : 6306802365206  
Option 4 ID : 6306802365205



Q.18 What is 'MATSYA 6000'?

- Ans
- ☐ 1. India's first Moon mission
  - ☐ 2. India's first manned space station
  - ☐ 3. India's first satellite
  - ☒ 4. India's first manned submersible to go deep into ocean

Question ID : 630680604514  
Option 1 ID : 6306802365516  
Option 2 ID : 6306802365519  
Option 3 ID : 6306802365518  
Option 4 ID : 6306802365517

Q.19 The MOGA-Indian Bison was the mascot for which of the following games?

- Ans
- ☒ 1. 37th National Games 2023
  - ☐ 2. Winter Olympic games 2020
  - ☐ 3. Cricket world cup 2023
  - ☐ 4. Summer Olympic games 2020

Question ID : 630680604431  
Option 1 ID : 6306802365184  
Option 2 ID : 6306802365187  
Option 3 ID : 6306802365185  
Option 4 ID : 6306802365186

Q.20 Legal Reserve Ratio (LRR) is increased by RBI during which among the following economic situation?

- Ans
- ☐ 1. Deflation
  - ☒ 2. Inflation
  - ☐ 3. When SENSEX is at its minimum level
  - ☐ 4. When SENSEX is at its maximum level

Question ID : 630680604520  
Option 1 ID : 6306802365540  
Option 2 ID : 6306802365541  
Option 3 ID : 6306802365543  
Option 4 ID : 6306802365542

Section : General Awareness 2

Q.1 The northern-most himalayan range is known as the \_\_\_\_\_.

- Ans
- ☐ 1. Shivalik
  - ☒ 2. Himadri
  - ☐ 3. Aravali
  - ☐ 4. Parasnath

Question ID : 630680604495  
Option 1 ID : 6306802365441  
Option 2 ID : 6306802365440  
Option 3 ID : 6306802365442  
Option 4 ID : 6306802365443

Q.2 According to the information available till 30 May 2023, how many total seats are there in Rajya Sabha?

- Ans
- ☐ 1. 240
  - ☒ 2. 250
  - ☐ 3. 245
  - ☐ 4. 231

Question ID : 630680604383  
Option 1 ID : 6306802364994  
Option 2 ID : 6306802364992  
Option 3 ID : 6306802364993  
Option 4 ID : 6306802364995

Q.3 Assam Himalayas lies between which of the following two rivers?

- Ans
- ☒ 1. Between Tista and Dihang rivers
  - ☐ 2. Between the Kali and Tista rivers
  - ☐ 3. Between Satluj and Kali rivers
  - ☐ 4. Between Indus and Satluj rivers

Question ID : 630680604455  
Option 1 ID : 6306802365283  
Option 2 ID : 6306802365282  
Option 3 ID : 6306802365280  
Option 4 ID : 6306802365281

Q.4 Lohri festival is celebrated majorly in which of the following states of India?

- Ans
- ☐ 1. Uttar Pradesh
  - ☐ 2. Odisha
  - ☐ 3. Assam
  - ☒ 4. Punjab

Question ID : 630680620004  
Option 1 ID : 6306802426014  
Option 2 ID : 6306802426016  
Option 3 ID : 6306802426013  
Option 4 ID : 6306802426015

Q.5 Which of the following animals does not belong to class of Aves?

- Ans
- ☐ 1. Ostrich
  - ☐ 2. Peacock
  - ☐ 3. Kiwi
  - ☒ 4. Snake

Question ID : 630680604388  
Option 1 ID : 6306802365014  
Option 2 ID : 6306802365012  
Option 3 ID : 6306802365015  
Option 4 ID : 6306802365013

Q.6 As per National Mineral Inventory data, India's largest resources of gold ore (primary) are located in which state of India?

- Ans
- ☐ 1. Jharkhand
  - ☒ 2. Bihar
  - ☐ 3. Uttar Pradesh
  - ☐ 4. Tamil Nadu

Question ID : 630680604509  
Option 1 ID : 6306802365499  
Option 2 ID : 6306802365496  
Option 3 ID : 6306802365497  
Option 4 ID : 6306802365498

Q.7 The part of the peninsular plateau lying to the north of Narmada river is called what among the following?

- Ans
- ☐ 1. Vindyan plateau
  - ☐ 2. Satpura plateau
  - ☒ 3. Central Highlands
  - ☐ 4. Chotanagpur plateau

Question ID : 630680604536  
Option 1 ID : 6306802365604  
Option 2 ID : 6306802365605  
Option 3 ID : 6306802365606  
Option 4 ID : 6306802365607

Q.8 In which of the following census has the highest sex ratio ever been recorded in India?

- Ans
- ☐ 1. 1891
  - ☒ 2. 1901
  - ☐ 3. 2011
  - ☐ 4. 1881

Question ID : 630680604459  
Option 1 ID : 6306802365297  
Option 2 ID : 6306802365299  
Option 3 ID : 6306802365298  
Option 4 ID : 6306802365296

Q.9 Urdu language derives its script from which of the following source?

- Ans
- ☐ 1. Dravidian
  - ☐ 2. Indo-Aryan
  - ☒ 3. Arabic-Persian
  - ☐ 4. Aryan

Question ID : 630680604371  
Option 1 ID : 6306802364946  
Option 2 ID : 6306802364944  
Option 3 ID : 6306802364945  
Option 4 ID : 6306802364947

Q.10 Which of the following is NOT true about parliament of India?

- Ans ☒ 1. The Constitution has given the states the option of establishing a unicameral legislature only.
- ☒ 2. The legislature of the states is described as State legislature.
- ☒ 3. The term 'Parliament' refers to the national legislature.
- ☒ 4. Lok Sabha is called as House of the people.

Question ID : 630680604384  
Option 1 ID : 6306802364999  
Option 2 ID : 6306802364997  
Option 3 ID : 6306802364996  
Option 4 ID : 6306802364998

Q.11 Somnath fair is organized in which of the following states?

- Ans ☒ 1. Sikkim
- ☒ 2. Bihar
- ☒ 3. Gujarat
- ☒ 4. Haryana

Question ID : 630680604533  
Option 1 ID : 6306802365595  
Option 2 ID : 6306802365593  
Option 3 ID : 6306802365592  
Option 4 ID : 6306802365594

Q.12 Based on the information available till December – 2023, how many fundamental rights does the Indian Constitution guarantee?

- Ans ☒ 1. 7
- ☒ 2. 6
- ☒ 3. 5
- ☒ 4. 4

Question ID : 630680604581  
Option 1 ID : 6306802365787  
Option 2 ID : 6306802365786  
Option 3 ID : 6306802365785  
Option 4 ID : 6306802365784

Q.13 Which of the following animal is a parasite of sheep liver?

- Ans ☒ 1. Earthworm
- ☒ 2. Tapeworm
- ☒ 3. Filaria worm
- ☒ 4. Fasciola

Question ID : 630680604546  
Option 1 ID : 6306802365644  
Option 2 ID : 6306802365645  
Option 3 ID : 6306802365646  
Option 4 ID : 6306802365647

Q.14 Which of the following state/UT registered maximum decadal growth rate as per final data of 2011 census?

- Ans ☒ 1. Dadra Nagar Haveli
- ☐ 2. Daman and Diu
- ☐ 3. Manipur
- ☐ 4. Meghalaya

Question ID : 630680619971  
Option 1 ID : 6306802425883  
Option 2 ID : 6306802425882  
Option 3 ID : 6306802425884  
Option 4 ID : 6306802425881

Q.15 Which of the following animals/Aves have a voice box called Syrinx?

- Ans ☐ 1. Amphibians
- ☒ 2. Birds
- ☐ 3. Mammals
- ☐ 4. Reptiles

Question ID : 630680604347  
Option 1 ID : 6306802364851  
Option 2 ID : 6306802364848  
Option 3 ID : 6306802364849  
Option 4 ID : 6306802364850

Q.16 Which of the following is not responsible for negatively affecting human health?

- Ans ☐ 1. Biodiversity loss
- ☐ 2. Waste mis-management
- ☒ 3. Afforestation
- ☐ 4. Air and Water Pollution

Question ID : 630680604430  
Option 1 ID : 6306802365180  
Option 2 ID : 6306802365182  
Option 3 ID : 6306802365183  
Option 4 ID : 6306802365181

Q.17 Which of the following right is NOT covered under fundamental rights?

- Ans ☒ 1. Right to exploitation
- ☐ 2. Right to freedom of religion
- ☐ 3. Right to freedom
- ☐ 4. Right to equality

Question ID : 630680604580  
Option 1 ID : 6306802365780  
Option 2 ID : 6306802365783  
Option 3 ID : 6306802365782  
Option 4 ID : 6306802365781

Q.18 Provisions regarding "Term of office of President of India " , has been discussed in which article of Indian constitution?

- Ans
- ☒ 1. Article - 55
  - ☒ 2. Article - 53
  - ☒ 3. Article - 56
  - ☒ 4. Article - 54

Question ID : 630680604542  
Option 1 ID : 6306802365628  
Option 2 ID : 6306802365631  
Option 3 ID : 6306802365629  
Option 4 ID : 6306802365630

Q.19 Which of the following tribal language is added in the year 2004 in Indian Constitution?

- Ans
- ☒ 1. Kuki
  - ☒ 2. Mundari
  - ☒ 3. Santhali
  - ☒ 4. Manipuri

Question ID : 630680604332  
Option 1 ID : 6306802364791  
Option 2 ID : 6306802364788  
Option 3 ID : 6306802364789  
Option 4 ID : 6306802364790

Q.20 Collective responsibility is based on the principle of the solidarity of the cabinet. It implies that a vote of no confidence even against \_\_\_\_\_ leads to the resignation of the entire Council of Ministers.

- Ans
- ☒ 1. At least two ministers
  - ☒ 2. Half of the entire cabinet
  - ☒ 3. A Single minister
  - ☒ 4. 1/10<sup>th</sup> of the entire cabinet

Question ID : 630680604465  
Option 1 ID : 6306802365321  
Option 2 ID : 6306802365323  
Option 3 ID : 6306802365320  
Option 4 ID : 6306802365322

Section : Arithmetical and Numerical Ability 1

Q.1 Simplify:  $(420 \times 60 - 720 + 1800) / 10$

Ans ☒ 1. 2628

☐ 2. 2260

☐ 3. 3240

☐ 4. 3165

Question ID : 630680603885  
Option 1 ID : 6306802362996  
Option 2 ID : 6306802362998  
Option 3 ID : 6306802362997  
Option 4 ID : 6306802362999

Q.2 What will be the value of 80% of 460 + 56% of 5600?

Ans ☒ 1. 3504

☐ 2. 3490

☐ 3. 3490.25

☐ 4. 350.75

Question ID : 630680619891  
Option 1 ID : 6306802426279  
Option 2 ID : 6306802426277  
Option 3 ID : 6306802426278  
Option 4 ID : 6306802426280

Q.3 A sum of ₹ 28600 is lent out at 6.2% per annum simple interest for 10 years. What will be amount after 10 years?

Ans ☐ 1. ₹ 36599

☐ 2. ₹ 44520

☒ 3. ₹ 46332

☐ 4. ₹ 38556

Question ID : 630680619920  
Option 1 ID : 6306802425764  
Option 2 ID : 6306802425763  
Option 3 ID : 6306802425761  
Option 4 ID : 6306802425762

Q.4 Simplify:  $(82 - 32) \times 4 + 20 \div 2$

Ans ☒ 1. 210

☐ 2. 90

☐ 3. 104

☐ 4. 95

Question ID : 630680603802  
Option 1 ID : 6306802362664  
Option 2 ID : 6306802362667  
Option 3 ID : 6306802362666  
Option 4 ID : 6306802362665

Q.5 The sum of four consecutive even numbers is 964, then which is the smallest number among them?

- Ans
- ☐ 1. 256
  - ☒ 2. 238
  - ☐ 3. 288
  - ☐ 4. 222

Question ID : 630680603727  
Option 1 ID : 6306802362366  
Option 2 ID : 6306802362365  
Option 3 ID : 6306802362367  
Option 4 ID : 6306802362364

Q.6 The average of 34% of A and 45% of B is equal to three-fifths of the difference of A and B. Find B as a percentage of A.

- Ans
- ☐ 1. 68.4%
  - ☐ 2. 40.6%
  - ☐ 3. 25.2%
  - ☒ 4. 52.12%

Question ID : 630680603731  
Option 1 ID : 6306802362383  
Option 2 ID : 6306802362381  
Option 3 ID : 6306802362380  
Option 4 ID : 6306802362382

Q.7 Study the following information carefully and answer the questions. The below table shows the investment of Neha and Sneha in three different insurance policies.

Scheme	Amount invested by Sneha (in Rs.)	Amount invested by Neha (in Rs.)
LIC	30500	20000
NPS	25500	14500
ELSS	20000	15500

If the investment of Priya in ELSS is 50% of the average investment of Sneha in NPS and LIC, then find the total investment of Priya in ELSS.

- Ans
- ☐ 1. ₹ 12500
  - ☐ 2. ₹ 13400
  - ☒ 3. ₹ 14000
  - ☐ 4. ₹ 11000

Question ID : 630680603800  
Option 1 ID : 6306802362657  
Option 2 ID : 6306802362658  
Option 3 ID : 6306802362659  
Option 4 ID : 6306802362656



Q.8 Simplify :  $1 + \frac{1}{2} + \frac{1}{3} + \frac{1}{4} + \frac{1}{6} + \frac{1}{24}$

- Ans
- ☐ 1. 24
  - ☐ 2. 5.5
  - ☐ 3. 12
  - ☒ 4. 2.3

Question ID : 630680603764  
Option 1 ID : 6306802362512  
Option 2 ID : 6306802362514  
Option 3 ID : 6306802362513  
Option 4 ID : 6306802362515

Q.9 A woman's wage was reduced by 24%. Again, the reduced wage was increased by 24%. Find her loss in terms of percentage

- Ans
- ☐ 1. 12.75%
  - ☐ 2. 8.6%
  - ☐ 3. 16.56%
  - ☒ 4. 5.76%

Question ID : 630680603770  
Option 1 ID : 6306802362538  
Option 2 ID : 6306802362536  
Option 3 ID : 6306802362539  
Option 4 ID : 6306802362537

Q.10 LCM of two numbers is 105. But their GCD is 21. The numbers are in a ratio 1:5. Which is the largest number amongst the two?

- Ans
- ☒ 1. 105
  - ☐ 2. 111
  - ☐ 3. 108
  - ☐ 4. 99

Question ID : 630680603925  
Option 1 ID : 6306802363158  
Option 2 ID : 6306802363156  
Option 3 ID : 6306802363157  
Option 4 ID : 6306802363159

Q.11 The selling price of 60 avocados is equal to cost price of 42 avocados. Find the profit or loss obtained.

- Ans
- ✓ 1. 30% loss
  - ✗ 2. 25% loss
  - ✗ 3. 30% gain
  - ✗ 4. 25% gain

Question ID : 630680603932  
Option 1 ID : 6306802363186  
Option 2 ID : 6306802363185  
Option 3 ID : 6306802363184  
Option 4 ID : 6306802363187

Q.12 The table given below shows the marked price and discount percentage of five different articles.

Article	Marked Price	Discount percentage
Trouser	1500	20 %
Blanket	3600	15 %
Shirt	1500	25 %
Jeans	2500	30 %
Goggle	2200	10 %
Saree	2800	15 %

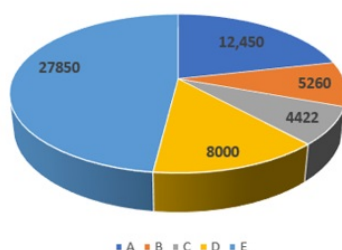
What is the selling price of Saree.

- Ans
- ✗ 1. ₹ 2640
  - ✗ 2. ₹ 2520
  - ✗ 3. ₹ 2400
  - ✓ 4. ₹ 2380

Question ID : 630680603959  
Option 1 ID : 6306802363295  
Option 2 ID : 6306802363294  
Option 3 ID : 6306802363293  
Option 4 ID : 6306802363292

**Q.13** The following pie-chart shows the sources of funds to be collected by the National Highways Authority of India (NHAI) for its Phase II projects. Study the pie-chart and answers the question that follow.

Sources of funds to be arranged by NHAI for Phase II projects (in crores Rs.)



Near about 21.4% of the funds are to be arranged through:

- Ans**
- ✓ 1. A
  - ✗ 2. D
  - ✗ 3. C
  - ✗ 4. B

Question ID : 630680603840  
 Option 1 ID : 6306802362816  
 Option 2 ID : 6306802362819  
 Option 3 ID : 6306802362818  
 Option 4 ID : 6306802362817

**Q.14** The average weight of 5 persons is increases by 2.5kg when a new person comes in place of one of them weighing 42 kg. What might be the weight of the new person?

- Ans**
- ✓ 1. 54.5 kg
  - ✗ 2. 50 kg
  - ✗ 3. 53 kg
  - ✗ 4. 62.5 kg

Question ID : 630680619905  
 Option 1 ID : 6306802425703  
 Option 2 ID : 6306802425704  
 Option 3 ID : 6306802425702  
 Option 4 ID : 6306802425701

**Q.15** The simple interest on a certain sum of money at rate of interest 5% per annum for 2 years is ₹ 600. What is the compound interest on the same sum for the same period and at the same rate of interest?

- Ans**
- ✗ 1. ₹420
  - ✗ 2. ₹415
  - ✗ 3. ₹610
  - ✓ 4. ₹615

Question ID : 630680603838  
 Option 1 ID : 6306802362809  
 Option 2 ID : 6306802362808  
 Option 3 ID : 6306802362810  
 Option 4 ID : 6306802362811

**Q.16** In a certain school, 37% of students are below 10 years of age. The number of students above 10 years of age is  $\frac{1}{2}$  of the number of students of 10 years of age which is 42. What is the total number of students in the school?

- Ans
- ☐ 1. 88
  - ☐ 2. 74
  - ☒ 3. 100
  - ☐ 4. 63

Question ID : 630680603888  
Option 1 ID : 6306802363010  
Option 2 ID : 6306802363009  
Option 3 ID : 6306802363011  
Option 4 ID : 6306802363008

**Q.17** A teacher is recording the marks of five students in a math quiz. The marks are as follows: 82, 96, 70, 78, and 92. What is the average score for these students?

- Ans
- ☒ 1. 83.6
  - ☐ 2. 75.5
  - ☐ 3. 68.5
  - ☐ 4. 78.6

Question ID : 630680619910  
Option 1 ID : 6306802425723  
Option 2 ID : 6306802425722  
Option 3 ID : 6306802425721  
Option 4 ID : 6306802425724

**Q.18** Which of the following is largest among others?

- Ans
- ☐ 1.  $\sqrt{0.0144}$
  - ☒ 2. 0.19
  - ☐ 3.  $(0.3)^2$
  - ☐ 4.  $\sqrt{0.0016}$

Question ID : 630680603724  
Option 1 ID : 6306802362353  
Option 2 ID : 6306802362355  
Option 3 ID : 6306802362354  
Option 4 ID : 6306802362352

Q.19 Find the compound interest on ₹14,600 for 2 years at 10% per annum compounded annually.

Ans ☒ 1. ₹ 3066

☐ 2. ₹ 3245

☐ 3. ₹ 3650

☐ 4. ₹ 2450

Question ID : 630680603917  
Option 1 ID : 6306802363125  
Option 2 ID : 6306802363126  
Option 3 ID : 6306802363127  
Option 4 ID : 6306802363124

Q.20 A sum of money on compound interest amounts to ₹ 9790 in 3 years and ₹ 8900 in 2 years. The rate of interest per annum is:

Ans ☐ 1. 18%

☐ 2. 12%

☐ 3. 15%

☒ 4. 10%

Question ID : 630680603716  
Option 1 ID : 6306802362323  
Option 2 ID : 6306802362321  
Option 3 ID : 6306802362322  
Option 4 ID : 6306802362320

Section : Arithmetical and Numerical Ability 2

Q.1 If  $x:y = 5:8$ , then  $(6x+3y):(6x-3y)$  is equal to:

Ans ☐ 1. 8

☐ 2. 6

☐ 3. 4

☒ 4. 9

Question ID : 630680603978  
Option 1 ID : 6306802363370  
Option 2 ID : 6306802363369  
Option 3 ID : 6306802363368  
Option 4 ID : 6306802363371

**Q.2** Two-person A and B can do a work in 120 days and 160 days respectively. They started the work together but A left after some time and B finished the remaining work in 20 days. After how many days A leave?

- Ans**
- ☐ 1. 50 days
  - ☒ 2. 60 days
  - ☐ 3. 105 days
  - ☐ 4. 57.5 days

Question ID : 630680603741  
Option 1 ID : 6306802362423  
Option 2 ID : 6306802362421  
Option 3 ID : 6306802362420  
Option 4 ID : 6306802362422

**Q.3** In a flight of 750 km, an aircraft was slowed down due to bad weather. Its average speed for the trip was reduced by 250 km/hr and the time of flight increased by 30 minutes. The duration of the flight is:

- Ans**
- ☐ 1. 72 min.
  - ☐ 2. 46 min.
  - ☐ 3. 40 min.
  - ☒ 4. 60 min.

Question ID : 630680603746  
Option 1 ID : 6306802362443  
Option 2 ID : 6306802362441  
Option 3 ID : 6306802362440  
Option 4 ID : 6306802362442

**Q.4** An Aeroplane covers a certain distance at a speed of 280 kmph in 4 hours. To cover the same distance in  $\frac{4}{5}$  hours, it must travel at a speed of:

- Ans**
- ☐ 1. 700 km/hr.
  - ☐ 2. 2100 km/hr.
  - ☐ 3. 1800 km/hr.
  - ☒ 4. 1400 km/hr.

Question ID : 630680603743  
Option 1 ID : 6306802362428  
Option 2 ID : 6306802362431  
Option 3 ID : 6306802362430  
Option 4 ID : 6306802362429

**Q.5** The area of a rhombus is  $540 \text{ cm}^2$  and one of the diagonals is 18 cm. Find the other diagonal.

- Ans**
- ☒ 1. 48 cm
  - ☒ 2. 40 cm
  - ☒ 3. 60 cm
  - ☒ 4. 58 cm

Question ID : 630680603908  
Option 1 ID : 6306802363089  
Option 2 ID : 6306802363088  
Option 3 ID : 6306802363091  
Option 4 ID : 6306802363090

**Q.6** The speed of a boat in still water is 8km/hr. If the speed of the boat against the stream is 4.5 km/hr, what is the speed of the stream?

- Ans**
- ☒ 1. 6 km/hr
  - ☒ 2. 3.5 km/hr
  - ☒ 3. 4 km/hr
  - ☒ 4. 2.5 km/hr

Question ID : 630680603864  
Option 1 ID : 6306802362914  
Option 2 ID : 6306802362915  
Option 3 ID : 6306802362912  
Option 4 ID : 6306802362913

**Q.7** The salaries A, B, C are in the ratio 3 : 5 : 6. If there is increments of 10%,20% and 40% respectively in their salaries, then what will be new ratio of their salaries?

- Ans**
- ☒ 1. 21 : 22 :26
  - ☒ 2. 20 : 32 :44
  - ☒ 3. 30 : 33 :43
  - ☒ 4. 11 : 20 :28

Question ID : 630680603860  
Option 1 ID : 6306802362897  
Option 2 ID : 6306802362899  
Option 3 ID : 6306802362898  
Option 4 ID : 6306802362896



Q.8 Which of the following will yield maximum discount on ₹ 62500?

- 1) 2 successive discounts of 6% and 6%
- 2) Single discount of 12%
- 3) 2 successive discounts of 10% and 2%

Ans ☒ 1. All will yield same discount

☒ 2. 2

☒ 3. 3

☒ 4. 1

Question ID : 630680603895  
Option 1 ID : 6306802363039  
Option 2 ID : 6306802363036  
Option 3 ID : 6306802363037  
Option 4 ID : 6306802363038

Q.9 Two towns P & Q are 256 km apart. A motorcycle rider starts from P towards Q at 1 p.m. at the speed of 40 km/hr. Another rider starts from Q towards P at 2 p.m. at the speed of 32 km/hr. Find at what time they will cross each other?

Ans ☒ 1. 8 p.m.

☒ 2. 5 p.m.

☒ 3. 6 p.m.

☒ 4. 9 p.m.

Question ID : 630680603905  
Option 1 ID : 6306802363076  
Option 2 ID : 6306802363078  
Option 3 ID : 6306802363079  
Option 4 ID : 6306802363077

Q.10 Raja got a new chair for 25% discount. Had Raja got no discount, Raja would have had to pay ₹ 175 more. How much did Raja pay for the chair?

Ans ☒ 1. ₹ 525

☒ 2. ₹ 500

☒ 3. ₹ 450

☒ 4. ₹ 575

Question ID : 630680619897  
Option 1 ID : 6306802426303  
Option 2 ID : 6306802426302  
Option 3 ID : 6306802426301  
Option 4 ID : 6306802426304



**Q.11** Gurmeet went to a shop and bought a sofa. She got a 20% discount on it. Had she gotten 25% discount she would have saved ₹1200 more. How much did she pay for the sofa?

- Ans**
- ☒ 1. ₹ 22000
  - ☒ 2. ₹19200
  - ☒ 3. ₹ 23600
  - ☒ 4. ₹ 10000

Question ID : 630680603816  
Option 1 ID : 6306802362722  
Option 2 ID : 6306802362720  
Option 3 ID : 6306802362723  
Option 4 ID : 6306802362721

**Q.12** 188 is divided into two parts in such a way that the fifth part of the first and the eighth part of the second are in the ratio 3 : 4. The first part is :

- Ans**
- ☒ 1. 65
  - ☒ 2. 55
  - ☒ 3. 60
  - ☒ 4. 52

Question ID : 630680603939  
Option 1 ID : 6306802363215  
Option 2 ID : 6306802363212  
Option 3 ID : 6306802363213  
Option 4 ID : 6306802363214

**Q.13** How many cubes with an edge length of 3 cm can fit inside a cuboid with dimensions of length, breadth and height given to be 12 m, 6 m, and 18 m, respectively?

- Ans**
- ☒ 1. 40000000
  - ☒ 2. 36000000
  - ☒ 3. 48000000
  - ☒ 4. 52400000

Question ID : 630680603911  
Option 1 ID : 6306802363101  
Option 2 ID : 6306802363100  
Option 3 ID : 6306802363102  
Option 4 ID : 6306802363103

**Q.14** Find the curved surface area of a cone, if its slant height is 54 cm and the radius of its base is 21 cm.

- Ans
- ✓ 1.  $3564 \text{ cm}^2$
  - ✗ 2.  $3115 \text{ cm}^2$
  - ✗ 3.  $2060 \text{ cm}^2$
  - ✗ 4.  $3015 \text{ cm}^2$

Question ID : 630680603869  
Option 1 ID : 6306802362935  
Option 2 ID : 6306802362933  
Option 3 ID : 6306802362934  
Option 4 ID : 6306802362932

**Q.15** The ratio of the radius of a sphere to the radius of a hemisphere is 5 : 7 respectively. The surface area of the sphere is what percentage more than the curved surface area of the hemisphere?

- Ans
- ✓ 1. 2%
  - ✗ 2. 15%
  - ✗ 3. 5%
  - ✗ 4. 18%

Question ID : 630680603992  
Option 1 ID : 6306802363426  
Option 2 ID : 6306802363427  
Option 3 ID : 6306802363425  
Option 4 ID : 6306802363424

**Q.16** A cistern has two pipes one can fill it with water in 36 hours and other can empty it in 20 hours. In how many hours will the cistern be emptied if both the pipes are opened together when  $\frac{1}{5}$ th of the cistern is already filled with water?

- Ans
- ✗ 1. 12 hrs.
  - ✗ 2. 4 hrs.
  - ✗ 3. 8 hrs.
  - ✓ 4. 9 hrs.

Question ID : 630680603902  
Option 1 ID : 6306802363067  
Option 2 ID : 6306802363064  
Option 3 ID : 6306802363065  
Option 4 ID : 6306802363066

Q.17 Two bicycles were sold for ₹ 6480 each, gaining 8% on one and losing 10% on the other. The gain or loss % on the whole transaction is:

- Ans
- ☐ 1. 2.56% loss
  - ☒ 2. 1.82% loss
  - ☐ 3. 2.56% gain
  - ☐ 4. 1.82% gain

Question ID : 630680603893  
Option 1 ID : 6306802363031  
Option 2 ID : 6306802363029  
Option 3 ID : 6306802363030  
Option 4 ID : 6306802363028

Q.18 The ratio of the total amount distributed in all the males and females as salary is 5: 8. The ratio of the salary of each male and female is 3: 4. Find the ratio of the no. of males and females.

- Ans
- ☐ 1. 3:5
  - ☐ 2. 7:9
  - ☒ 3. 5:6
  - ☐ 4. 5:7

Question ID : 630680619903  
Option 1 ID : 6306802425696  
Option 2 ID : 6306802425694  
Option 3 ID : 6306802425693  
Option 4 ID : 6306802425695

Q.19 A girl wants to make a square-shaped figure from a circular wire of radius 84 cm. Determine the sides of a square.

- Ans
- ☒ 1. 132 cm
  - ☐ 2. 210 cm
  - ☐ 3. 160 cm
  - ☐ 4. 220 cm

Question ID : 630680603827  
Option 1 ID : 6306802362765  
Option 2 ID : 6306802362764  
Option 3 ID : 6306802362766  
Option 4 ID : 6306802362767

**Q.20** The areas of a square and a rectangle are equal. The length of the rectangle is greater than the length of any side of the square by 5cm and the breadth is less by 4cm. Find the perimeter of the rectangle.

- Ans
- ☐ 1. 84 cm
  - ☐ 2. 78 cm
  - ☒ 3. 82 cm
  - ☐ 4. 88 cm

Question ID : 630680619909  
Option 1 ID : 6306802425719  
Option 2 ID : 6306802425717  
Option 3 ID : 6306802425718  
Option 4 ID : 6306802425720

Section : Test of English Language and Comprehension 1

**Q.1** Choose the answer below that spells the word in bold correctly.  
**Sport** became the perfect outlet for his aggression.

- Ans
- ☒ 1. aggression
  - ☐ 2. agression
  - ☐ 3. agreson
  - ☐ 4. aggressionn

Question ID : 630680620239  
Option 1 ID : 6306802427066  
Option 2 ID : 6306802427065  
Option 3 ID : 6306802427067  
Option 4 ID : 6306802427068

**Q.2** Select the most appropriate meaning of the proverb below from the given options.  
**"A goose quill is more dangerous than a lion's claw"**

- Ans
- ☐ 1. Challenges and hardships are opportunities for personal growth
  - ☐ 2. Once something is done, it's irreversible
  - ☒ 3. Foul, inconsiderate words can cause more pain than a physical attack
  - ☐ 4. Even in difficult times, there's hope and a limited duration of darkness

Question ID : 630680620369  
Option 1 ID : 6306802427561  
Option 2 ID : 6306802427563  
Option 3 ID : 6306802427564  
Option 4 ID : 6306802427562

Q.3 Choose the most logical order of the sentences from among the four given choices to construct a coherent paragraph.  
In recent times, we are often shocked by the occurrence of natural disasters that strike almost every country and have taken the lives of thousands of innocent people.  
A) The reckless pursuit of building development without considering the long-term effects on the environment should be a concern of the world's society today.  
B) The environment is a treasure created over hundreds or even thousands of years but destroyed by humans in just a few years.  
C) Many question the cause of these natural disasters and scientifically it has been proven that it is the result of modernization carried out by human beings.  
D) Therefore, each of us must reflect and start finding ways to preserve and conserve the environment for the benefit of environmental interests.

- Ans
- ☒ 1. BDCA
  - ☒ 2. CABD
  - ☒ 3. ABCD
  - ☒ 4. CADB

Question ID : 630680620275  
Option 1 ID : 6306802427202  
Option 2 ID : 6306802427203  
Option 3 ID : 6306802427201  
Option 4 ID : 6306802427204

Q.4 Select the most appropriate preposition from the given option to fill in the blanks for the given sentence.  
I'm busy just now, but I'll be with you \_\_\_\_\_ a moment.

- Ans
- ☒ 1. At
  - ☒ 2. In
  - ☒ 3. On
  - ☒ 4. From

Question ID : 630680620142  
Option 1 ID : 6306802426695  
Option 2 ID : 6306802426696  
Option 3 ID : 6306802426694  
Option 4 ID : 6306802426693

Q.5 Choose the most appropriate one-word substitution for the below word.  
"the study of ancient writings and scriptures"

- Ans
- ☒ 1. Genealogy
  - ☒ 2. Palaeography
  - ☒ 3. Anthropology
  - ☒ 4. Chronology

Question ID : 630680620320  
Option 1 ID : 6306802427374  
Option 2 ID : 6306802427373  
Option 3 ID : 6306802427375  
Option 4 ID : 6306802427376

Q.6 Select the most appropriate preposition from the given option to fill in the blanks for the given sentence.

We were hungry when we came. We hadn't had anything to eat \_\_\_\_\_ the journey.

- Ans
- ☒ 1. During
  - ☐ 2. Amongst
  - ☐ 3. While
  - ☐ 4. Between

Question ID : 630680620144  
Option 1 ID : 6306802426703  
Option 2 ID : 6306802426702  
Option 3 ID : 6306802426701  
Option 4 ID : 6306802426704

Q.7 Choose the answer below that spells the word in bold correctly.  
Careful scrutiny of the company's accounts revealed a whole series of errors.

- Ans
- ☐ 1. scrutine
  - ☒ 2. scrutiny
  - ☐ 3. screwtiny
  - ☐ 4. scruteny

Question ID : 630680620364  
Option 1 ID : 6306802427544  
Option 2 ID : 6306802427542  
Option 3 ID : 6306802427541  
Option 4 ID : 6306802427543

Q.8 Select the appropriate article from the below options to complete the sentence. Mark "No article" if there is no requirement of article in the given sentence.  
There are about fifty calories in \_\_\_\_\_apple.

- Ans
- ☐ 1. the
  - ☒ 2. an
  - ☐ 3. a
  - ☐ 4. No article

Question ID : 630680620231  
Option 1 ID : 6306802427035  
Option 2 ID : 6306802427034  
Option 3 ID : 6306802427036  
Option 4 ID : 6306802427033

Q.9 Select the appropriate article from the below options to complete the sentence. Mark "No article" if there is no requirement of article in the given sentence.  
There is \_\_\_\_\_blue English book on the desk.

- Ans
- ☒ 1. No article
  - ☒ 2. the
  - ☒ 3. an
  - ☒ 4. a

Question ID : 630680620313  
Option 1 ID : 6306802427346  
Option 2 ID : 6306802427348  
Option 3 ID : 6306802427347  
Option 4 ID : 6306802427345

Q.10 Read the below statement and fill in the gaps using correct positive question tags.  
You won't tell anyone, \_\_\_\_\_?

- Ans
- ☒ 1. should you
  - ☒ 2. you will
  - ☒ 3. will you
  - ☒ 4. couldn't you

Question ID : 630680620306  
Option 1 ID : 6306802427320  
Option 2 ID : 6306802427318  
Option 3 ID : 6306802427319  
Option 4 ID : 6306802427317

Q.11 Choose the most logical order of the sentences from among the four given choices to construct a coherent paragraph.  
The spirit of cooperation is one of the important and vital elements that help create harmonious members of the community, with a sense of identity and spirit of love for the country.  
A) Therefore, the role of schools is very important in nurturing the spirit of cooperation among students in schools.  
B) Through teaching and learning, teachers can guide students about the importance of the spirit of cooperation.  
C) Various cooperative activities among students such as cleaning up the school area, tidying up and brightening the classrooms, decorating the school with the national flag on the occasion of Independence Day celebrations and so on can be implemented.  
D) In summary, the spirit of cooperation is part of the practices and culture of the community that makes a country unique in the eyes of people abroad and even recognized worldwide.

- Ans
- ☒ 1. ABCD
  - ☒ 2. CABD
  - ☒ 3. DCBA
  - ☒ 4. BCDA

Question ID : 630680620148  
Option 1 ID : 6306802426718  
Option 2 ID : 6306802426717  
Option 3 ID : 6306802426720  
Option 4 ID : 6306802426719

Q.12 Choose the most appropriate one-word substitution for the below word.  
A person who hates and avoids human society"

- Ans    ☒ 1. Misanthrope  
         ☐ 2. insolvent  
         ☐ 3. Cacographer  
         ☐ 4. Narcissist

Question ID : 630680620321  
Option 1 ID : 6306802427377  
Option 2 ID : 6306802427379  
Option 3 ID : 6306802427378  
Option 4 ID : 6306802427380

Q.13 Choose the most appropriate one-word substitution for the below word.  
"One who knows many languages"

- Ans    ☒ 1. Polyglot  
         ☐ 2. polygamy  
         ☐ 3. monoglot  
         ☐ 4. monogamy

Question ID : 630680620194  
Option 1 ID : 6306802426893  
Option 2 ID : 6306802426895  
Option 3 ID : 6306802426894  
Option 4 ID : 6306802426896

Q.14 Choose the most appropriate one-word substitution for the below word.  
"Examination of a dead body"

- Ans    ☒ 1. Autopsy  
         ☐ 2. Biopsy  
         ☐ 3. Vaccination  
         ☐ 4. Surgery

Question ID : 630680620234  
Option 1 ID : 6306802427048  
Option 2 ID : 6306802427045  
Option 3 ID : 6306802427047  
Option 4 ID : 6306802427046

Q.15 Select the most appropriate preposition from the given option to fill in the blanks for the given sentence.  
There is a bridge \_\_\_\_\_the railway line.

- Ans    ☐ 1. at  
         ☐ 2. among  
         ☐ 3. of  
         ☒ 4. over

Question ID : 630680620225  
Option 1 ID : 6306802427009  
Option 2 ID : 6306802427012  
Option 3 ID : 6306802427011  
Option 4 ID : 6306802427010



Q.16 Read the below statement and fill in the gaps using correct positive question tags.  
The phone didn't ring, \_\_\_\_\_?

- Ans    ☒ 1. did it  
         ☐ 2. should it  
         ☐ 3. would it  
         ☐ 4. shouldn't it

Question ID : 630680620265  
Option 1 ID : 6306802427162  
Option 2 ID : 6306802427163  
Option 3 ID : 6306802427161  
Option 4 ID : 6306802427164

Q.17 Select the most appropriate preposition from the given option to fill in the blanks for the given sentence.  
He is not popular \_\_\_\_\_ the students.

- Ans    ☐ 1. at  
         ☐ 2. above  
         ☐ 3. with  
         ☒ 4. among

Question ID : 630680620227  
Option 1 ID : 6306802427020  
Option 2 ID : 6306802427017  
Option 3 ID : 6306802427018  
Option 4 ID : 6306802427019

Q.18 Choose the answer below that spells the word in bold correctly.  
An **assessment** by an independent educational psychologist was essential.

- Ans    ☒ 1. assessment  
         ☐ 2. asessment  
         ☐ 3. assessmment  
         ☐ 4. assesment

Question ID : 630680620366  
Option 1 ID : 6306802427551  
Option 2 ID : 6306802427550  
Option 3 ID : 6306802427552  
Option 4 ID : 6306802427549

Q.19 Select the appropriate article from the below options to complete the sentence. Mark "No article" if there is no requirement of article in the given sentence.  
Sorry, we don't have any biscuits. Would you like \_\_\_\_\_ apple?

- Ans    ☒ 1. An  
         ☐ 2. No article  
         ☐ 3. The  
         ☐ 4. A

Question ID : 630680620145  
Option 1 ID : 6306802426705  
Option 2 ID : 6306802426706  
Option 3 ID : 6306802426708  
Option 4 ID : 6306802426707

Q.20 Read the below statement and fill in the gaps using correct positive question tags.  
I'm never on time, \_\_\_\_\_?

- Ans    ☒ 1. am I  
         ☐ 2. can I  
         ☐ 3. I should  
         ☐ 4. would I

Question ID : 630680620307  
Option 1 ID : 6306802427322  
Option 2 ID : 6306802427321  
Option 3 ID : 6306802427323  
Option 4 ID : 6306802427324

Section : Test of English Language and Comprehension 2

Q.1 Select the most appropriate meaning of the proverb below from the given options.  
"Cross the stream where it is shallowest"

- Ans    ☒ 1. Do things in the easiest possible way  
         ☐ 2. Enquiring into others' work can be dangerous. One should mind own business  
         ☐ 3. The consequence of wrongdoings always catches up with the wrongdoer  
         ☐ 4. Different people have different needs and wants, and we should be respectful to them

Question ID : 630680620413  
Option 1 ID : 6306802427730  
Option 2 ID : 6306802427729  
Option 3 ID : 6306802427731  
Option 4 ID : 6306802427732

Q.2 Select the most appropriate meaning of the proverb below from the given options.  
"Absence makes heart grow fonder"

- Ans    ☒ 1. When we're away from loved ones, we long for their company more than in normal times  
         ☐ 2. A rare, precious opportunity that comes with some problems is better than a regular opportunity that seems to be perfect  
         ☐ 3. Fools lose money because of their foolish conduct  
         ☐ 4. When someone is in a difficult situation, s/he will take any available opportunity to come out of it

Question ID : 630680620368  
Option 1 ID : 6306802427559  
Option 2 ID : 6306802427557  
Option 3 ID : 6306802427560  
Option 4 ID : 6306802427558

Q.3 In the following question out of the four alternatives, choose the one which best expresses the meaning of the given word as your answer.  
Apathetic

- Ans
- ☒ 1. Concerned
  - ☒ 2. Attentive
  - ☒ 3. Uninterested
  - ☒ 4. Aware

Question ID : 630680620331  
Option 1 ID : 6306802427417  
Option 2 ID : 6306802427418  
Option 3 ID : 6306802427419  
Option 4 ID : 6306802427420

Q.4 Select the most appropriate meaning of the proverb below from the given options.  
"The grass is always greener on the other side"

- Ans
- ☒ 1. Other people always seem to be in a better situation, although it might not be true
  - ☒ 2. Getting something late is better than never getting it
  - ☒ 3. The perception of beauty varies from person to person
  - ☒ 4. Family relationships are always stronger than other relationships

Question ID : 630680620284  
Option 1 ID : 6306802427239  
Option 2 ID : 6306802427238  
Option 3 ID : 6306802427237  
Option 4 ID : 6306802427240

Q.5 In the following question out of the four alternatives, choose the one which best expresses the meaning of the given word as your answer.  
Vain

- Ans
- ☒ 1. Futile
  - ☒ 2. Successful
  - ☒ 3. Virtuous
  - ☒ 4. Efficient

Question ID : 630680620373  
Option 1 ID : 6306802427578  
Option 2 ID : 6306802427577  
Option 3 ID : 6306802427580  
Option 4 ID : 6306802427579

Q.6 Select the most appropriate meaning of the proverb below from the given options.  
"A closed mouth catches no flies."

- Ans
- ☒ 1. Once something is done, it's irreversible
  - ☒ 2. Even in difficult times, there's hope and a limited duration of darkness
  - ☒ 3. the less you talk about something or people, less the chances of you being judged
  - ☒ 4. Challenges and hardships are opportunities for personal growth

Question ID : 630680620243  
Option 1 ID : 6306802427084  
Option 2 ID : 6306802427082  
Option 3 ID : 6306802427083  
Option 4 ID : 6306802427081

Q.7 In the following question out of the four alternatives, choose the one which best expresses the meaning of the given word as your answer.  
Dire

- Ans
- ☒ 1. Negligible
  - ☒ 2. Urgent
  - ☒ 3. Bright
  - ☒ 4. Trivial

Question ID : 630680620415  
Option 1 ID : 6306802427740  
Option 2 ID : 6306802427737  
Option 3 ID : 6306802427738  
Option 4 ID : 6306802427739

Q.8 In the following question out of the four alternatives, choose the one which best expresses the meaning of the given word as your answer.  
Delusion

- Ans
- ☒ 1. Truth
  - ☒ 2. illusion
  - ☒ 3. Fact
  - ☒ 4. reality

Question ID : 630680620416  
Option 1 ID : 6306802427744  
Option 2 ID : 6306802427741  
Option 3 ID : 6306802427742  
Option 4 ID : 6306802427743

Q.9 In the following question out of the four alternatives, choose the one which best expresses the meaning of the given word as your answer.  
versatility

- Ans
- ☒ 1. dullness
  - ☒ 2. creativity
  - ☒ 3. slowness
  - ☒ 4. boredom

Question ID : 630680620208  
Option 1 ID : 6306802426949  
Option 2 ID : 6306802426950  
Option 3 ID : 6306802426952  
Option 4 ID : 6306802426951

Q.10 Select the most appropriate meaning of the proverb below from the given options.  
Never put off until tomorrow what you can do today

- Ans
- ☐ 1. A true friend is one who helps you when you need it
  - ☐ 2. You become better at a skill by practising it
  - ☒ 3. Do not delay a task if you can do it immediately
  - ☐ 4. To not interfere in someone else's matter

Question ID : 630680620160  
Option 1 ID : 6306802426768  
Option 2 ID : 6306802426765  
Option 3 ID : 6306802426767  
Option 4 ID : 6306802426766

Comprehension:

Refer to the below passage.  
The issue of garbage collection and recycling has become a pressing concern in our modern world. With the growing population, the amount of waste produced is also increasing rapidly, leading to harmful effects on the environment.

Various companies are working on solutions to address the problem of plastic waste. However, the authors highlight the importance of cost-effective solutions that are not only effective but also profitable for businesses. To combat the ever-increasing plastic waste, the collective efforts of legislative bodies, polymer manufacturers, and consumers are needed. The study identifies mechanical and chemical processing, dissolution, chemical processing with the creation of new plastic materials, and recycling plastic into fuel and chemicals as some of the most effective methods of processing plastic waste.

One of the advantages of plastic recycling is the possibility of reducing CO2 emissions. Using chemicals that do not harm the environment during the burning of plastic results in lower CO2 emissions than with standard plastic burning. Additionally, the CO2 released can be used to obtain monomers, which can create new recycled plastic goods. Thus, the production of new goods from old ones can contribute to preserving the environment and protecting the lives of people, birds, and animals.

To address the urgent problem of plastic waste, individuals and businesses must act collectively. By implementing effective recycling methods, we can reduce the amount of plastic waste and contribute to preserving the environment. The study provides valuable insights into the most effective methods of processing plastic waste and emphasizes the importance of cost-effective solutions that can be profitable for businesses. Moreover, reducing CO2 emissions and preventing harm to ecosystems, animals, and humans through recycling can help save the planet from the impending catastrophe.

SubQuestion No : 11

Q.11 Select the most appropriate SYNONYM of the given word below.  
Catastrophe

- Ans
- ☐ 1. achievement
  - ☐ 2. Boon
  - ☐ 3. Success
  - ☒ 4. Disaster

Question ID : 630680620425  
Option 1 ID : 6306802427773  
Option 2 ID : 6306802427776  
Option 3 ID : 6306802427774  
Option 4 ID : 6306802427775

### Comprehension:

Refer to the below passage.

The issue of garbage collection and recycling has become a pressing concern in our modern world. With the growing population, the amount of waste produced is also increasing rapidly, leading to harmful effects on the environment.

Various companies are working on solutions to address the problem of plastic waste. However, the authors highlight the importance of cost-effective solutions that are not only effective but also profitable for businesses. To combat the ever-increasing plastic waste, the collective efforts of legislative bodies, polymer manufacturers, and consumers are needed. The study identifies mechanical and chemical processing, dissolution, chemical processing with the creation of new plastic materials, and recycling plastic into fuel and chemicals as some of the most effective methods of processing plastic waste.

One of the advantages of plastic recycling is the possibility of reducing CO<sub>2</sub> emissions. Using chemicals that do not harm the environment during the burning of plastic results in lower CO<sub>2</sub> emissions than with standard plastic burning. Additionally, the CO<sub>2</sub> released can be used to obtain monomers, which can create new recycled plastic goods. Thus, the production of new goods from old ones can contribute to preserving the environment and protecting the lives of people, birds, and animals.

To address the urgent problem of plastic waste, individuals and businesses must act collectively. By implementing effective recycling methods, we can reduce the amount of plastic waste and contribute to preserving the environment. The study provides valuable insights into the most effective methods of processing plastic waste and emphasizes the importance of cost-effective solutions that can be profitable for businesses. Moreover, reducing CO<sub>2</sub> emissions and preventing harm to ecosystems, animals, and humans through recycling can help save the planet from the impending catastrophe.

### SubQuestion No : 12

Q.12 Identify the central theme of the passage.

- Ans
- ☐ 1. The passage talks about the effective measures to be taken to reduce CO<sub>2</sub> emissions and preventing harm to ecosystems.
  - ☐ 2. The passage talks about the various methodologies used in burning plastics.
  - ☐ 3. The passage talks about the advantages of plastic recycling only then there is the possibility of reducing CO<sub>2</sub> emissions.
  - ☒ 4. The passage talks about the growing population and how with this the amount of waste produced is also increasing rapidly, leading to harmful effects on the environment. By implementing effective recycling methods, we can reduce the amount of plastic waste and contribute to preserving the environment.

Question ID : 630680620422  
Option 1 ID : 6306802427762  
Option 2 ID : 6306802427764  
Option 3 ID : 6306802427763  
Option 4 ID : 6306802427761

**Comprehension:**

Refer to the below passage.  
The issue of garbage collection and recycling has become a pressing concern in our modern world. With the growing population, the amount of waste produced is also increasing rapidly, leading to harmful effects on the environment.

Various companies are working on solutions to address the problem of plastic waste. However, the authors highlight the importance of cost-effective solutions that are not only effective but also profitable for businesses. To combat the ever-increasing plastic waste, the collective efforts of legislative bodies, polymer manufacturers, and consumers are needed. The study identifies mechanical and chemical processing, dissolution, chemical processing with the creation of new plastic materials, and recycling plastic into fuel and chemicals as some of the most effective methods of processing plastic waste.

One of the advantages of plastic recycling is the possibility of reducing CO2 emissions. Using chemicals that do not harm the environment during the burning of plastic results in lower CO2 emissions than with standard plastic burning. Additionally, the CO2 released can be used to obtain monomers, which can create new recycled plastic goods. Thus, the production of new goods from old ones can contribute to preserving the environment and protecting the lives of people, birds, and animals.

To address the urgent problem of plastic waste, individuals and businesses must act collectively. By implementing effective recycling methods, we can reduce the amount of plastic waste and contribute to preserving the environment. The study provides valuable insights into the most effective methods of processing plastic waste and emphasizes the importance of cost-effective solutions that can be profitable for businesses. Moreover, reducing CO2 emissions and preventing harm to ecosystems, animals, and humans through recycling can help save the planet from the impending catastrophe.

**SubQuestion No : 13**

- Q.13 Given below is a word, followed by three sentences that consist of that word. From the given options identify the sentence(s) that best express(es) the meaning of the word.  
Effective  
A) We find advertising on the radio very effective.  
B) This car polish is an effective shield against rust.  
C) Commercial television is an effective medium for advertising.

- Ans ☒ 1. C only  
☒ 2. B only  
☒ 3. A, B & C only  
☒ 4. A only

Question ID : 630680620423  
Option 1 ID : 6306802427767  
Option 2 ID : 6306802427768  
Option 3 ID : 6306802427766  
Option 4 ID : 6306802427765

**Comprehension:**

Refer to the below passage.

The issue of garbage collection and recycling has become a pressing concern in our modern world. With the growing population, the amount of waste produced is also increasing rapidly, leading to harmful effects on the environment.

Various companies are working on solutions to address the problem of plastic waste. However, the authors highlight the importance of cost-effective solutions that are not only effective but also profitable for businesses. To combat the ever-increasing plastic waste, the collective efforts of legislative bodies, polymer manufacturers, and consumers are needed. The study identifies mechanical and chemical processing, dissolution, chemical processing with the creation of new plastic materials, and recycling plastic into fuel and chemicals as some of the most effective methods of processing plastic waste.

One of the advantages of plastic recycling is the possibility of reducing CO2 emissions. Using chemicals that do not harm the environment during the burning of plastic results in lower CO2 emissions than with standard plastic burning. Additionally, the CO2 released can be used to obtain monomers, which can create new recycled plastic goods. Thus, the production of new goods from old ones can contribute to preserving the environment and protecting the lives of people, birds, and animals.

To address the urgent problem of plastic waste, individuals and businesses must act collectively. By implementing effective recycling methods, we can reduce the amount of plastic waste and contribute to preserving the environment. The study provides valuable insights into the most effective methods of processing plastic waste and emphasizes the importance of cost-effective solutions that can be profitable for businesses. Moreover, reducing CO2 emissions and preventing harm to ecosystems, animals, and humans through recycling can help save the planet from the impending catastrophe.

**SubQuestion No : 14**

**Q.14** Given below is a word, followed by three sentences that consist of that word. From the given options identify the sentence(s) that best express(es) the meaning of the word.

**Contribute**

- A) Everybody should contribute to the discussion.
- B) A better water supply would contribute dramatically to the villagers' well-being.
- C) It's increasingly difficult to recruit and contribute good staff.

**Ans**     1. A & B only

 2. B & C only

 3. A & C only

 4. A, B & C only

Question ID : 630680620424

Option 1 ID : 6306802427770

Option 2 ID : 6306802427771

Option 3 ID : 6306802427769

Option 4 ID : 6306802427772



**Comprehension:**

Refer to the below passage.

The issue of garbage collection and recycling has become a pressing concern in our modern world. With the growing population, the amount of waste produced is also increasing rapidly, leading to harmful effects on the environment.

Various companies are working on solutions to address the problem of plastic waste. However, the authors highlight the importance of cost-effective solutions that are not only effective but also profitable for businesses. To combat the ever-increasing plastic waste, the collective efforts of legislative bodies, polymer manufacturers, and consumers are needed. The study identifies mechanical and chemical processing, dissolution, chemical processing with the creation of new plastic materials, and recycling plastic into fuel and chemicals as some of the most effective methods of processing plastic waste.

One of the advantages of plastic recycling is the possibility of reducing CO2 emissions. Using chemicals that do not harm the environment during the burning of plastic results in lower CO2 emissions than with standard plastic burning. Additionally, the CO2 released can be used to obtain monomers, which can create new recycled plastic goods. Thus, the production of new goods from old ones can contribute to preserving the environment and protecting the lives of people, birds, and animals.

To address the urgent problem of plastic waste, individuals and businesses must act collectively. By implementing effective recycling methods, we can reduce the amount of plastic waste and contribute to preserving the environment. The study provides valuable insights into the most effective methods of processing plastic waste and emphasizes the importance of cost-effective solutions that can be profitable for businesses. Moreover, reducing CO2 emissions and preventing harm to ecosystems, animals, and humans through recycling can help save the planet from the impending catastrophe.

**SubQuestion No : 15**

**Q.15** Identify the suitable title for the passage.

- Ans
- ☐ 1. Polymer manufacturers and their issues
  - ☐ 2. Combat the not so increasing plastic waste
  - ☐ 3. Recycling- waste of time
  - ☒ 4. Addressing the Urgent Problem of Plastic Waste through Recycling

Question ID : 630680620421  
Option 1 ID : 6306802427760  
Option 2 ID : 6306802427758  
Option 3 ID : 6306802427759  
Option 4 ID : 6306802427757



**Comprehension:**

Refer to the below passage.

In today's world, advertising is ubiquitous. It permeates every facet of mass media, from television to newspapers, and companies spend millions of dollars annually to advertise their products and services. But what are the benefits of advertising? Despite the criticisms, advertising has many advantages for both buyers and sellers.

One of the most significant benefits of advertising is that it provides a wide range of options for both employers and job seekers. Companies can use advertising to recruit workers, while individuals looking to sell their properties can find potential buyers. Advertising can connect people and provide a platform for them to reach their desired audience. Moreover, advertising is essential for the survival of many television and radio stations. Companies that advertise on these platforms can also build a reputation for their products, resulting in increased sales volume and a more extensive customer base. Additionally, businesses that sponsor major sporting events can contribute to the development of sports in the country and increase their brand exposure. Advertisements also play a vital role in informing the public about the range of products available in the market and their costs. Customers can compare the prices and merits of different products before making a purchasing decision. Advertising helps increase sales volume, enabling companies to expand their business and enjoy economies of scale.

In conclusion, advertising provides a myriad of benefits to both buyers and sellers. It connects people, promotes businesses, and allows individuals to make informed purchasing decisions. While advertising may have its drawbacks, the benefits are significant, and the discerning public can choose which advertisements to follow.

**SubQuestion No : 16**

**Q.16** Identify the suitable title for the passage.

- Ans
- ☒ 1. Advertising and sales stories
  - ☒ 2. Advertising - television and radio stations
  - ☒ 3. Disadvantages of Advertising
  - ☒ 4. The Benefits of Advertising

Question ID : 630680620385  
Option 1 ID : 6306802427619  
Option 2 ID : 6306802427620  
Option 3 ID : 6306802427618  
Option 4 ID : 6306802427617



### Comprehension:

Refer to the below passage.

In today's world, advertising is ubiquitous. It permeates every facet of mass media, from television to newspapers, and companies spend millions of dollars annually to advertise their products and services. But what are the benefits of advertising? Despite the criticisms, advertising has many advantages for both buyers and sellers.

One of the most significant benefits of advertising is that it provides a wide range of options for both employers and job seekers. Companies can use advertising to recruit workers, while individuals looking to sell their properties can find potential buyers. Advertising can connect people and provide a platform for them to reach their desired audience. Moreover, advertising is essential for the survival of many television and radio stations. Companies that advertise on these platforms can also build a reputation for their products, resulting in increased sales volume and a more extensive customer base. Additionally, businesses that sponsor major sporting events can contribute to the development of sports in the country and increase their brand exposure. Advertisements also play a vital role in informing the public about the range of products available in the market and their costs. Customers can compare the prices and merits of different products before making a purchasing decision. Advertising helps increase sales volume, enabling companies to expand their business and enjoy economies of scale. In conclusion, advertising provides a myriad of benefits to both buyers and sellers. It connects people, promotes businesses, and allows individuals to make informed purchasing decisions. While advertising may have its drawbacks, the benefits are significant, and the discerning public can choose which advertisements to follow.

### SubQuestion No : 17

Q.17 Given below is a word, followed by three sentences that consist of that word. From the given options identify the sentence(s) that best express(es) the meaning of the word.

Recruit

- A) This is a nationwide campaign to recruit women into trade unions.
- B) Most orthodox doctors however recruit this as complete nonsense.
- C) It's increasingly difficult to recruit and retain good staff.

Ans ☒ 1. A & C only

☒ 2. A, B & C only

☒ 3. A & B only

☒ 4. B & C only

Question ID : 630680620387  
Option 1 ID : 6306802427626  
Option 2 ID : 6306802427627  
Option 3 ID : 6306802427628  
Option 4 ID : 6306802427625



**Comprehension:**

Refer to the below passage.

In today's world, advertising is ubiquitous. It permeates every facet of mass media, from television to newspapers, and companies spend millions of dollars annually to advertise their products and services. But what are the benefits of advertising? Despite the criticisms, advertising has many advantages for both buyers and sellers.

One of the most significant benefits of advertising is that it provides a wide range of options for both employers and job seekers. Companies can use advertising to recruit workers, while individuals looking to sell their properties can find potential buyers. Advertising can connect people and provide a platform for them to reach their desired audience. Moreover, advertising is essential for the survival of many television and radio stations. Companies that advertise on these platforms can also build a reputation for their products, resulting in increased sales volume and a more extensive customer base. Additionally, businesses that sponsor major sporting events can contribute to the development of sports in the country and increase their brand exposure. Advertisements also play a vital role in informing the public about the range of products available in the market and their costs. Customers can compare the prices and merits of different products before making a purchasing decision. Advertising helps increase sales volume, enabling companies to expand their business and enjoy economies of scale. In conclusion, advertising provides a myriad of benefits to both buyers and sellers. It connects people, promotes businesses, and allows individuals to make informed purchasing decisions. While advertising may have its drawbacks, the benefits are significant, and the discerning public can choose which advertisements to follow.

**SubQuestion No : 18**

**Q.18** Given below is a word, followed by three sentences that consist of that word. From the given options identify the sentence(s) that best express(es) the meaning of the word.

**Exposure**

- A) Exposure to the sun can accelerate the ageing process.
- B) She suffered a massive exposure to toxic chemicals.
- C) There is convincing evidence of a link between exposure to sun and skin cancer.

- Ans**
- ☒ 1. A only
  - ☒ 2. A, B & C only
  - ☒ 3. C only
  - ☒ 4. B only

Question ID : 630680620386  
Option 1 ID : 6306802427622  
Option 2 ID : 6306802427621  
Option 3 ID : 6306802427623  
Option 4 ID : 6306802427624



**Comprehension:**

Refer to the below passage.

In today's world, advertising is ubiquitous. It permeates every facet of mass media, from television to newspapers, and companies spend millions of dollars annually to advertise their products and services. But what are the benefits of advertising? Despite the criticisms, advertising has many advantages for both buyers and sellers.

One of the most significant benefits of advertising is that it provides a wide range of options for both employers and job seekers. Companies can use advertising to recruit workers, while individuals looking to sell their properties can find potential buyers. Advertising can connect people and provide a platform for them to reach their desired audience. Moreover, advertising is essential for the survival of many television and radio stations. Companies that advertise on these platforms can also build a reputation for their products, resulting in increased sales volume and a more extensive customer base. Additionally, businesses that sponsor major sporting events can contribute to the development of sports in the country and increase their brand exposure. Advertisements also play a vital role in informing the public about the range of products available in the market and their costs. Customers can compare the prices and merits of different products before making a purchasing decision. Advertising helps increase sales volume, enabling companies to expand their business and enjoy economies of scale.

In conclusion, advertising provides a myriad of benefits to both buyers and sellers. It connects people, promotes businesses, and allows individuals to make informed purchasing decisions. While advertising may have its drawbacks, the benefits are significant, and the discerning public can choose which advertisements to follow.

**SubQuestion No : 19**

**Q.19** Select the most appropriate SYNONYM of the given word below.  
**Ubiquitous**

- Ans
- ☒ 1. rare
  - ☒ 2. unfamiliar
  - ☒ 3. common
  - ☒ 4. unusual

Question ID : 630680620388  
Option 1 ID : 6306802427630  
Option 2 ID : 6306802427631  
Option 3 ID : 6306802427632  
Option 4 ID : 6306802427629



**Comprehension:**

Refer to the below passage.

In today's world, advertising is ubiquitous. It permeates every facet of mass media, from television to newspapers, and companies spend millions of dollars annually to advertise their products and services. But what are the benefits of advertising? Despite the criticisms, advertising has many advantages for both buyers and sellers.

One of the most significant benefits of advertising is that it provides a wide range of options for both employers and job seekers. Companies can use advertising to recruit workers, while individuals looking to sell their properties can find potential buyers. Advertising can connect people and provide a platform for them to reach their desired audience. Moreover, advertising is essential for the survival of many television and radio stations. Companies that advertise on these platforms can also build a reputation for their products, resulting in increased sales volume and a more extensive customer base. Additionally, businesses that sponsor major sporting events can contribute to the development of sports in the country and increase their brand exposure. Advertisements also play a vital role in informing the public about the range of products available in the market and their costs. Customers can compare the prices and merits of different products before making a purchasing decision. Advertising helps increase sales volume, enabling companies to expand their business and enjoy economies of scale. In conclusion, advertising provides a myriad of benefits to both buyers and sellers. It connects people, promotes businesses, and allows individuals to make informed purchasing decisions. While advertising may have its drawbacks, the benefits are significant, and the discerning public can choose which advertisements to follow.

**SubQuestion No : 20**

**Q.20** Select the most appropriate SYNONYM of the given word below.  
**Facet**

- Ans    ☒ 1. Aspect  
         ☐ 2. Bulky  
         ☐ 3. uncover  
         ☐ 4. Slight

Question ID : 630680620389  
Option 1 ID : 6306802427635  
Option 2 ID : 6306802427634  
Option 3 ID : 6306802427636  
Option 4 ID : 6306802427633

**Section : Test of Hindi Language and Comprehension 1**

**Q.1** 'हथियार डाल देना' मुहावरों का उचित अर्थ बताये |

- Ans    ☐ 1. दुविधा  
         ☒ 2. हार मान लेना  
         ☐ 3. मार डालना  
         ☐ 4. प्रभाव ज़माना

Question ID : 630680606122  
Option 1 ID : 6306802371735  
Option 2 ID : 6306802371734  
Option 3 ID : 6306802371736  
Option 4 ID : 6306802371733

Q.2 निम्नलिखित वाक्यों में से कौन – सा वाक्य शुद्ध है?

- Ans ☒ 1. वह पुस्तक किसकी है ?  
☐ 2. पढ़ता बहुत है वह ।  
☐ 3. आठ-दस सेब खाया ।  
☐ 4. उसने होली में खूब भंग ढाला ।

Question ID : 630680606218  
Option 1 ID : 6306802372096  
Option 2 ID : 6306802372093  
Option 3 ID : 6306802372095  
Option 4 ID : 6306802372094

Q.3 निम्नलिखित में से 'अंगारों पर लोटना' मुहावरे का क्या तात्पर्य है?

- Ans ☐ 1. आग पर लेटना  
☐ 2. मर जाना  
☒ 3. दुःख सहना  
☐ 4. जल जाना

Question ID : 630680605993  
Option 1 ID : 6306802371256  
Option 2 ID : 6306802371253  
Option 3 ID : 6306802371254  
Option 4 ID : 6306802371255

Q.4 निम्नलिखित शब्दों में से 'पूजा' शब्द का पर्यायवाची शब्द कौन नहीं है?

- Ans ☐ 1. पूजन  
☒ 2. बितप  
☐ 3. वंदना  
☐ 4. उपासना

Question ID : 630680606074  
Option 1 ID : 6306802371554  
Option 2 ID : 6306802371555  
Option 3 ID : 6306802371553  
Option 4 ID : 6306802371556

Q.5 निम्न में से 'मृदुल' का विलोम शब्द क्या होगा?

- Ans ☐ 1. कठिन  
☒ 2. कठोर  
☐ 3. खराब  
☐ 4. सरल

Question ID : 630680606118  
Option 1 ID : 6306802371717  
Option 2 ID : 6306802371718  
Option 3 ID : 6306802371719  
Option 4 ID : 6306802371720

Q.6 बचपन शब्द किस संज्ञा का उदाहरण है?

- Ans
- ☒ 1. द्रव्य वाचक संज्ञा
  - ☒ 2. समूहवाचक संज्ञा
  - ☒ 3. जातिवाचक संज्ञा
  - ☒ 4. भाववाचक संज्ञा

Question ID : 630680606091  
Option 1 ID : 6306802371624  
Option 2 ID : 6306802371623  
Option 3 ID : 6306802371622  
Option 4 ID : 6306802371621

Q.7 निम्नलिखित शब्दों में से 'पर्वत' शब्द का पर्यायवाची शब्द कौन है?

- Ans
- ☒ 1. पंथी
  - ☒ 2. अचल
  - ☒ 3. उपल
  - ☒ 4. दारा

Question ID : 630680606075  
Option 1 ID : 6306802371558  
Option 2 ID : 6306802371557  
Option 3 ID : 6306802371559  
Option 4 ID : 6306802371560

Q.8 निम्नलिखित शब्दों में से 'गृहस्थ' शब्द का विलोम शब्द क्या है?

- Ans
- ☒ 1. संन्यासी
  - ☒ 2. मकान
  - ☒ 3. गोचर
  - ☒ 4. लाघव

Question ID : 630680606033  
Option 1 ID : 6306802371402  
Option 2 ID : 6306802371404  
Option 3 ID : 6306802371401  
Option 4 ID : 6306802371403

Q.9 लहनासिंह/ आँख/ समझ/ मारते-मारते/ सब/ गया/ ।  
दिए गए शब्दों को सही क्रम में सजाने पर निम्न में से कौन से वाक्य की रचना होगी?

- Ans
- ☒ 1. आँख मारते-मारते लहनासिंह सब समझ गया।
  - ☒ 2. लहनासिंह सब समझ गया आँख मारते-मारते।
  - ☒ 3. सब समझ गया आँख मारते-मारते लहनासिंह।
  - ☒ 4. सब समझ गया लहनासिंह आँख मारते-मारते।

Question ID : 630680606088  
Option 1 ID : 6306802371609  
Option 2 ID : 6306802371612  
Option 3 ID : 6306802371611  
Option 4 ID : 6306802371610



Q.10 'बिल्ली के गले में घंटी' लोकोक्ति का उचित अर्थ बताये |

- Ans
- ☐ 1. किसी काम का न होना |
  - ☐ 2. दिखावटी होना |
  - ☐ 3. घमंड करना |
  - ☒ 4. कठिन काम पूरा करना |

Question ID : 630680606211  
Option 1 ID : 6306802372067  
Option 2 ID : 6306802372068  
Option 3 ID : 6306802372066  
Option 4 ID : 6306802372065

Q.11 निम्नलिखित शब्दों में से कौन सा शब्द 'सर' का अर्थ है?

- Ans
- ☒ 1. तालाब
  - ☐ 2. बादल
  - ☐ 3. साँप
  - ☐ 4. अर्क

Question ID : 630680605985  
Option 1 ID : 6306802371222  
Option 2 ID : 6306802371221  
Option 3 ID : 6306802371223  
Option 4 ID : 6306802371224

Q.12 'आग पर पानी डालना' मुहावरा का उचित अर्थ बताये |

- Ans
- ☐ 1. गुस्सा होना |
  - ☒ 2. शांत करना |
  - ☐ 3. भाग जाना |
  - ☐ 4. दुखी होना |

Question ID : 630680606209  
Option 1 ID : 6306802372060  
Option 2 ID : 6306802372058  
Option 3 ID : 6306802372057  
Option 4 ID : 6306802372059

Q.13 निम्न में से 'खाना' का अनेकार्थक शब्द क्या होगा?

- Ans
- ☐ 1. वस्तु
  - ☐ 2. सोना
  - ☒ 3. विभाग
  - ☐ 4. खरल

Question ID : 630680606201  
Option 1 ID : 6306802372027  
Option 2 ID : 6306802372028  
Option 3 ID : 6306802372026  
Option 4 ID : 6306802372025

Q.14 'चिराग तले अँधेरा' लोकोक्ति का उचित अर्थ बताये।

- Ans
- ☒ 1. काम न जानना
  - ☒ 2. एक काम से दूसरा काम हो जाना
  - ☒ 3. अधिक लाभ
  - ☒ 4. अपनी बुराई नहीं देखना

Question ID : 630680606124  
Option 1 ID : 6306802371741  
Option 2 ID : 6306802371743  
Option 3 ID : 6306802371742  
Option 4 ID : 6306802371744

Q.15 'सुबह हुई और भौरे गुंजार करने लगे।' निम्न में से किस प्रकार का वाक्य है?

- Ans
- ☒ 1. मिश्र वाक्य
  - ☒ 2. उपवाक्य
  - ☒ 3. संयुक्त वाक्य
  - ☒ 4. सरल वाक्य

Question ID : 630680606130  
Option 1 ID : 6306802371767  
Option 2 ID : 6306802371765  
Option 3 ID : 6306802371766  
Option 4 ID : 6306802371768

Q.16 निम्न में से 'अन्वय' का संधि - विच्छेद बताये।

- Ans
- ☒ 1. अनु + वय
  - ☒ 2. अनु + अय
  - ☒ 3. अन्य + वय
  - ☒ 4. अनु + अवय

Question ID : 630680606258  
Option 1 ID : 6306802372241  
Option 2 ID : 6306802372243  
Option 3 ID : 6306802372244  
Option 4 ID : 6306802372242

Q.17 निम्नलिखित शब्दों में से 'झोपड़ी' शब्द का विलोम शब्द क्या है?

- Ans
- ☒ 1. होटल
  - ☒ 2. खपड़ा
  - ☒ 3. महल
  - ☒ 4. झोपड़ा

Question ID : 630680620056  
Option 1 ID : 6306802426144  
Option 2 ID : 6306802426141  
Option 3 ID : 6306802426143  
Option 4 ID : 6306802426142

Q.18 परोपकार का संधि विच्छेद क्या होगा?

- Ans ☒ 1. पर+उपकार  
☒ 2. परोप+कार  
☒ 3. पर+पकार  
☒ 4. परो+उपकार

Question ID : 630680605998  
Option 1 ID : 6306802371273  
Option 2 ID : 6306802371274  
Option 3 ID : 6306802371275  
Option 4 ID : 6306802371276

Q.19 निम्नलिखित वाक्यों में से कौन - सा वाक्य शुद्ध है?

- Ans ☒ 1. उसने एक मोती का हार खरीदा।  
☒ 2. उजली घास गाय चर रही है।  
☒ 3. एक हवाईजहाज दूसरे का पीछा कर रहा है।  
☒ 4. वह अन्डे में पानी उबालकर खाती है।

Question ID : 630680606212  
Option 1 ID : 6306802372070  
Option 2 ID : 6306802372069  
Option 3 ID : 6306802372072  
Option 4 ID : 6306802372071

Q.20 निम्न में से 'परिच्छेद' का संधि - विच्छेद बताये।

- Ans ☒ 1. परी + छेद  
☒ 2. पारी + छेद  
☒ 3. परि + छेद  
☒ 4. प्री + छेद

Question ID : 630680606257  
Option 1 ID : 6306802372240  
Option 2 ID : 6306802372238  
Option 3 ID : 6306802372237  
Option 4 ID : 6306802372239

Section : Test of Hindi Language and Comprehension 2

Q.1 'सीता ने बच्चे को मिठाई दी।' में रेखांकित शब्द/शब्द-समूह का कारक ज्ञात कीजिये।

- Ans ☒ 1. अधिकरण  
☒ 2. सम्प्रदान  
☒ 3. करण  
☒ 4. कर्ता

Question ID : 630680606176  
Option 1 ID : 6306802371939  
Option 2 ID : 6306802371940  
Option 3 ID : 6306802371938  
Option 4 ID : 6306802371937

Q.2 'नील' शब्द से कौन से विशेषण का निर्माण होगा?

- Ans ☒ 1. नीलिमा  
☒ 2. नीला  
☒ 3. नील  
☒ 4. नीलम

Question ID : 630680606094  
Option 1 ID : 6306802371634  
Option 2 ID : 6306802371635  
Option 3 ID : 6306802371636  
Option 4 ID : 6306802371633

Q.3 "आपको गहरे हरे रंग की पैंट नहीं पहननी चाहिए।" वाक्य में रेखांकित शब्द का प्रकार बताए?

- Ans ☒ 1. प्रविशेषण  
☒ 2. संज्ञा  
☒ 3. विशेषण  
☒ 4. सर्वनाम

Question ID : 630680606095  
Option 1 ID : 6306802371640  
Option 2 ID : 6306802371637  
Option 3 ID : 6306802371639  
Option 4 ID : 6306802371638

Q.4 'सोहन रमेश को पुस्तक देता है।' वाक्य में कौन-सा कारक है?

- Ans ☒ 1. सम्प्रदानकारक  
☒ 2. कारणकारक  
☒ 3. अपादानकारक  
☒ 4. कर्मकारक

Question ID : 630680620077  
Option 1 ID : 6306802426217  
Option 2 ID : 6306802426218  
Option 3 ID : 6306802426220  
Option 4 ID : 6306802426219

Q.5 'टेबल पर पुस्तक रखी है' इस वाक्य में रेखांकित शब्द/शब्द-समूह में कौन सा कारक है?

- Ans ☒ 1. अधिकरण कारक  
☒ 2. संबंध कारक  
☒ 3. कर्म कारक  
☒ 4. अपादान कारक

Question ID : 630680606006  
Option 1 ID : 6306802371307  
Option 2 ID : 6306802371305  
Option 3 ID : 6306802371308  
Option 4 ID : 6306802371306

**Comprehension:**

निम्नलिखित गद्यांश को ध्यानपूर्वक पढ़िए और पूछे गए प्रश्न का सही विकल्प चुनिये।

“भारत के नवजागरण की शंख -ध्वनि करने वाले महापुरुष में स्वामी विवेकानन्द का स्थान अद्वितीय है। उनका दिव्य संदेश सम्पूर्ण विश्व के लिए नए आध्यात्मिक उत्थान का उद्घोष था। स्वामी विवेकानन्द का जन्म 1863 ई में हुआ था। उनका बचपन का नाम नरेंद्र नाथ था। वे बचपन से ही होनहार थे। उन्होंने अंग्रेजी स्कूलों में शिक्षा पाई और 1884 ई में बी.ए. की डिग्री प्राप्त की। कुछ दिनों तक वे ब्रह्म समाज के अनुयायी रहे। स्वर याचा होने के कारण कीर्तन-समाज में उनका बड़ा आदर था, परंतु ब्रह्म समाज के सिद्धांत उनकी प्यास ना बुझा सके। अतः सत्य की खोज में वे इधर उधर भटकने लगे। नरेंद्र स्वामी रामकृष्ण परमहंस के उपदेशों से प्रभावित हुए। उनसे अध्यात्म-तत्व और वेदान्त रहस्य पाकर नरेंद्र की आध्यात्मिक पिपासा शांत हुई।

**SubQuestion No : 6**

**Q.6 स्वामी विवेकानन्द के गुरु कौन थे?**

- Ans
- ☒ 1. दयानंद सरस्वती
  - ☒ 2. रामकृष्ण परमहंस
  - ☒ 3. राजा राममोहन रॉय
  - ☒ 4. श्रीला प्रभूपाद

Question ID : 630680620064  
Option 1 ID : 6306802426169  
Option 2 ID : 6306802426171  
Option 3 ID : 6306802426170  
Option 4 ID : 6306802426172

**Comprehension:**

निम्नलिखित गद्यांश को ध्यानपूर्वक पढ़िए और पूछे गए प्रश्न का सही विकल्प चुनिये।

“भारत के नवजागरण की शंख -ध्वनि करने वाले महापुरुष में स्वामी विवेकानन्द का स्थान अद्वितीय है। उनका दिव्य संदेश सम्पूर्ण विश्व के लिए नए आध्यात्मिक उत्थान का उद्घोष था। स्वामी विवेकानन्द का जन्म 1863 ई में हुआ था। उनका बचपन का नाम नरेंद्र नाथ था। वे बचपन से ही होनहार थे। उन्होंने अंग्रेजी स्कूलों में शिक्षा पाई और 1884 ई में बी.ए. की डिग्री प्राप्त की। कुछ दिनों तक वे ब्रह्म समाज के अनुयायी रहे। स्वर याचा होने के कारण कीर्तन-समाज में उनका बड़ा आदर था, परंतु ब्रह्म समाज के सिद्धांत उनकी प्यास ना बुझा सके। अतः सत्य की खोज में वे इधर उधर भटकने लगे। नरेंद्र स्वामी रामकृष्ण परमहंस के उपदेशों से प्रभावित हुए। उनसे अध्यात्म-तत्व और वेदान्त रहस्य पाकर नरेंद्र की आध्यात्मिक पिपासा शांत हुई।

**SubQuestion No : 7**

**Q.7 स्वामी विवेकानन्द की गुरु भक्ति किस सीमा तक पहुँच गई थी?**

- Ans
- ☒ 1. गुरु पूजा
  - ☒ 2. गुरु आदर
  - ☒ 3. गुरु सम्मान
  - ☒ 4. गुरु शिष्य

Question ID : 630680620065  
Option 1 ID : 6306802426176  
Option 2 ID : 6306802426174  
Option 3 ID : 6306802426175  
Option 4 ID : 6306802426173

### Comprehension:

निम्नलिखित गद्यांश को ध्यानपूर्वक पढ़िए और पूछे गए प्रश्न का सही विकल्प चुनिये।

“भारत के नवजागरण की शंख -ध्वनि करने वाले महापुरुष में स्वामी विवेकानन्द का स्थान अद्वितीय है। उनका दिव्य संदेश सम्पूर्ण विश्व के लिए नए आध्यात्मिक उत्थान का उद्घोष था। स्वामी विवेकानन्द का जन्म 1863 ई में हुआ था। उनका बचपन का नाम नरेंद्र नाथ था। वे बचपन से ही होनहार थे। उन्होंने अंग्रेजी स्कूलों में शिक्षा पाई और 1884 ई में बी.ए. की डिग्री प्राप्त की। कुछ दिनों तक वे ब्रह्म समाज के अनुयायी रहे। स्वर याचा होने के कारण कीर्तन-समाज में उनका बड़ा आदर था, परंतु ब्रह्म समाज के सिद्धांत उनकी प्यास ना बुझा सके। अतः सत्य की खोज में वे इधर उधर भटकने लगे। नरेंद्र स्वामी रामकृष्ण परमहंस के उपदेशों से प्रभावित हुए। उनसे अध्यात्म-तत्व और वेदान्त रहस्य पाकर नरेंद्र की आध्यात्मिक पिपासा शांत हुई।

### SubQuestion No : 8

Q.8 स्वामीजी ने बी.ए. की डिग्री कब प्राप्त की?

Ans ☒ 1. 1884 ई

☐ 2. 1905 ई

☐ 3. 1897 ई

☐ 4. 1863 ई

Question ID : 630680620063

Option 1 ID : 6306802426166

Option 2 ID : 6306802426168

Option 3 ID : 6306802426167

Option 4 ID : 6306802426165

### Comprehension:

निम्नलिखित गद्यांश को ध्यानपूर्वक पढ़िए और पूछे गए प्रश्न का सही विकल्प चुनिये।

“भारत के नवजागरण की शंख -ध्वनि करने वाले महापुरुष में स्वामी विवेकानन्द का स्थान अद्वितीय है। उनका दिव्य संदेश सम्पूर्ण विश्व के लिए नए आध्यात्मिक उत्थान का उद्घोष था। स्वामी विवेकानन्द का जन्म 1863 ई में हुआ था। उनका बचपन का नाम नरेंद्र नाथ था। वे बचपन से ही होनहार थे। उन्होंने अंग्रेजी स्कूलों में शिक्षा पाई और 1884 ई में बी.ए. की डिग्री प्राप्त की। कुछ दिनों तक वे ब्रह्म समाज के अनुयायी रहे। स्वर याचा होने के कारण कीर्तन-समाज में उनका बड़ा आदर था, परंतु ब्रह्म समाज के सिद्धांत उनकी प्यास ना बुझा सके। अतः सत्य की खोज में वे इधर उधर भटकने लगे। नरेंद्र स्वामी रामकृष्ण परमहंस के उपदेशों से प्रभावित हुए। उनसे अध्यात्म-तत्व और वेदान्त रहस्य पाकर नरेंद्र की आध्यात्मिक पिपासा शांत हुई।

### SubQuestion No : 9

Q.9 दिए गए गद्यांश के आधार पर भारत के नवजागरण की शंख-ध्वनि करने वाले महापुरुष में निम्न में से कौन थे?

Ans ☐ 1. कबीर

☐ 2. तुलसीदास

☒ 3. स्वामी विवेकानन्द

☐ 4. सूरदास

Question ID : 630680620066

Option 1 ID : 6306802426177

Option 2 ID : 6306802426178

Option 3 ID : 6306802426180

Option 4 ID : 6306802426179

### Comprehension:

निम्नलिखित गद्यांश को ध्यानपूर्वक पढ़िए और पूछे गए प्रश्न का सही विकल्प चुनिये।

“भारत के नवजागरण की शंख -ध्वनि करने वाले महापुरुष में स्वामी विवेकानन्द का स्थान अद्वितीय है। उनका दिव्य संदेश सम्पूर्ण विश्व के लिए नए आध्यात्मिक उत्थान का उद्घोष था। स्वामी विवेकानन्द का जन्म 1863 ई में हुआ था। उनका बचपन का नाम नरेंद्र नाथ था। वे बचपन से ही होनहार थे। उन्होंने अंग्रेजी स्कूलों में शिक्षा पाई और 1884 ई में बी.ए. की डिग्री प्राप्त की। कुछ दिनों तक वे ब्रह्म समाज के अनुयायी रहे। स्वर याचा होने के कारण कीर्तन-समाज में उनका बड़ा आदर था, परंतु ब्रह्म समाज के सिद्धांत उनकी प्यास ना बुझा सके। अतः सत्य की खोज में वे इधर उधर भटकने लगे। नरेंद्र स्वामी रामकृष्ण परमहंस के उपदेशों से प्रभावित हुए। उनसे अध्यात्म-तत्व और वेदान्त रहस्य पाकर नरेंद्र की आध्यात्मिक पिपासा शांत हुई।

### SubQuestion No : 10

Q.10 विवेकानन्द जी का जन्म कब हुआ था?

Ans ☒ 1. 1863 ई

☐ 2. 1905 ई

☐ 3. 1884 ई

☐ 4. 1897 ई

Question ID : 630680620062

Option 1 ID : 6306802426161

Option 2 ID : 6306802426164

Option 3 ID : 6306802426162

Option 4 ID : 6306802426163

### Comprehension:

निम्नलिखित गद्यांश को ध्यानपूर्वक पढ़िए और पूछे गए प्रश्न का सही विकल्प चुनिये।

“साहस की जिंदगी सबसे बड़ी जिंदगी होती है। ऐसी जिंदगी की सबसे बड़ी पहचान यह है कि वह बिल्कुल निडर - बेखौफ होती है। साहसी मनुष्य की पहली पहचान यह है कि वह इस बात की चिंता नहीं करता कि लोग उसके बारे में क्या सोचते हैं ? जनमत की उपेक्षा करके जीने वाला आदमी दुनिया की असली ताकत होता है। साहसी लोग अपने उद्देश्य की तुलना न तो पड़ोसी के उद्देश्य से करते हैं और ना अपनी चाल को ही पड़ोसी की चाल देखकर मद्धिम बनते हैं। वह सपने उधार नहीं लेता। वह विचारों में रमा हुआ अपनी ही किताब पढ़ता है। झुंड में चलना भेड़ और भैंस का काम है। सिंह तो अकेला ही चलता है।”

### SubQuestion No : 11

Q.11 कौन सी जिंदगी सबसे बड़ी जिंदगी होती है?

Ans ☐ 1. बुजदिल की

☐ 2. डरपोक की

☒ 3. साहस की

☐ 4. कायर की

Question ID : 630680606017

Option 1 ID : 6306802371344

Option 2 ID : 6306802371342

Option 3 ID : 6306802371341

Option 4 ID : 6306802371343

**Comprehension:**

निम्नलिखित गद्यांश को ध्यानपूर्वक पढ़िए और पूछे गए प्रश्न का सही विकल्प चुनिये।

“साहस की जिंदगी सबसे बड़ी जिंदगी होती है। ऐसी जिंदगी की सबसे बड़ी पहचान यह है कि वह बिल्कुल निडर - बेखौफ होती है। साहसी मनुष्य की पहली पहचान यह है कि वह इस बात की चिंता नहीं करता कि लोग उसके बारे में क्या सोचते हैं ? जनमत की उपेक्षा करके जीने वाला आदमी दुनिया की असली ताकत होता है। साहसी लोग अपने उद्देश्य की तुलना न तो पड़ोसी के उद्देश्य से करते हैं और ना अपनी चाल को ही पड़ोसी की चाल देखकर मद्धिम बनते हैं। वह सपने उधार नहीं लेता। वह विचारों में रमा हुआ अपनी ही किताब पढ़ता है। झुंड में चलना भेड़ और भैंस का काम है। सिंह तो अकेला ही चलता है।”

**SubQuestion No : 12**

**Q.12 निम्न में से कौन सा शब्द “साहस” का पर्यायवाची नहीं है?**

Ans ☒ 1. बुज़दिल

☐ 2. निडर

☐ 3. निर्भय

☐ 4. बेखौफ

Question ID : 630680606018

Option 1 ID : 6306802371347

Option 2 ID : 6306802371345

Option 3 ID : 6306802371348

Option 4 ID : 6306802371346

**Comprehension:**

निम्नलिखित गद्यांश को ध्यानपूर्वक पढ़िए और पूछे गए प्रश्न का सही विकल्प चुनिये।

“साहस की जिंदगी सबसे बड़ी जिंदगी होती है। ऐसी जिंदगी की सबसे बड़ी पहचान यह है कि वह बिल्कुल निडर - बेखौफ होती है। साहसी मनुष्य की पहली पहचान यह है कि वह इस बात की चिंता नहीं करता कि लोग उसके बारे में क्या सोचते हैं ? जनमत की उपेक्षा करके जीने वाला आदमी दुनिया की असली ताकत होता है। साहसी लोग अपने उद्देश्य की तुलना न तो पड़ोसी के उद्देश्य से करते हैं और ना अपनी चाल को ही पड़ोसी की चाल देखकर मद्धिम बनते हैं। वह सपने उधार नहीं लेता। वह विचारों में रमा हुआ अपनी ही किताब पढ़ता है। झुंड में चलना भेड़ और भैंस का काम है। सिंह तो अकेला ही चलता है।”

**SubQuestion No : 13**

**Q.13 साहसी लोग अपने उद्देश्य की तुलना किस से नहीं करते है?**

Ans ☐ 1. स्वयं से

☒ 2. पड़ोसी से

☐ 3. खुद से

☐ 4. आप से

Question ID : 630680606020

Option 1 ID : 6306802371354

Option 2 ID : 6306802371353

Option 3 ID : 6306802371356

Option 4 ID : 6306802371355



### Comprehension:

निम्नलिखित गद्यांश को ध्यानपूर्वक पढ़िए और पूछे गए प्रश्न का सही विकल्प चुनिये।

“साहस की जिंदगी सबसे बड़ी जिंदगी होती है। ऐसी जिंदगी की सबसे बड़ी पहचान यह है कि वह बिल्कुल निडर - बेखौफ होती है। साहसी मनुष्य की पहली पहचान यह है कि वह इस बात की चिंता नहीं करता कि लोग उसके बारे में क्या सोचते हैं ? जनमत की उपेक्षा करके जीने वाला आदमी दुनिया की असली ताकत होता है। साहसी लोग अपने उद्देश्य की तुलना न तो पड़ोसी के उद्देश्य से करते हैं और ना अपनी चाल को ही पड़ोसी की चाल देखकर मद्धिम बनते हैं। वह सपने उधार नहीं लेता। वह विचारों में रमा हुआ अपनी ही किताब पढ़ता है। झुंड में चलना भेड़ और भैंस का काम है। सिंह तो अकेला ही चलता है।”

### SubQuestion No : 14

Q.14 कौन झुंड में नहीं चलता है?

Ans ☒ 1. सिंह

☒ 2. भैंस

☒ 3. लोमड़ी

☒ 4. भेड़

Question ID : 630680606019

Option 1 ID : 6306802371350

Option 2 ID : 6306802371351

Option 3 ID : 6306802371352

Option 4 ID : 6306802371349

### Comprehension:

निम्नलिखित गद्यांश को ध्यानपूर्वक पढ़िए और पूछे गए प्रश्न का सही विकल्प चुनिये।

“साहस की जिंदगी सबसे बड़ी जिंदगी होती है। ऐसी जिंदगी की सबसे बड़ी पहचान यह है कि वह बिल्कुल निडर - बेखौफ होती है। साहसी मनुष्य की पहली पहचान यह है कि वह इस बात की चिंता नहीं करता कि लोग उसके बारे में क्या सोचते हैं ? जनमत की उपेक्षा करके जीने वाला आदमी दुनिया की असली ताकत होता है। साहसी लोग अपने उद्देश्य की तुलना न तो पड़ोसी के उद्देश्य से करते हैं और ना अपनी चाल को ही पड़ोसी की चाल देखकर मद्धिम बनते हैं। वह सपने उधार नहीं लेता। वह विचारों में रमा हुआ अपनी ही किताब पढ़ता है। झुंड में चलना भेड़ और भैंस का काम है। सिंह तो अकेला ही चलता है।”

### SubQuestion No : 15

Q.15 साहसी व्यक्ति की पहली पहचान क्या होती है?

Ans ☒ 1. वह इस बात की चिंता नहीं करता कि लोग उसके बारे में क्या सोचते हैं

☒ 2. वह इस बात की चिंता करता कि लोग उसके बारे में क्या सोचते हैं

☒ 3. वह पड़ोसी की चल देख कर मद्धिम बनता है

☒ 4. वह हमेशा पड़ोसी से खुद की तुलना करता है

Question ID : 630680606021

Option 1 ID : 6306802371359

Option 2 ID : 6306802371358

Option 3 ID : 6306802371360

Option 4 ID : 6306802371357

**Comprehension:**

निम्नलिखित गद्यांश को ध्यानपूर्वक पढ़िए और पूछे गए प्रश्न का सही विकल्प चुनिये।  
“विद्यार्थी जीवन ही वह समय है जिसमें बच्चों के चरित्र व्यवहार तथा आचरण को जैसा चाहे वैसा रूप दिया जा सकता है। यह अवस्था वृक्ष की कोमल शाखा की भांति है जिसे जिधर चाहे मोड़ा जा सकता है पूर्णतः विकसित वृक्ष की शाखाओं को मोड़ना संभव नहीं है वह टूट तो सकती है पर मुड़ नहीं सकती। छात्रावस्था सफेद चादर की तरह है जिस पर एक बाहर जो रंग चढ़ गया फिर वह पूर्ववस्था को प्राप्त नहीं हो सकता। इसी अवस्था में सुसंस्कार और सद्गुणियाँ पोषित की जा सकती हैं। इसलिए प्राचीन समय में बालक गुरुकुल में रहकर कठोर अनुशासन का पालन करते थे।”

**SubQuestion No : 16**

**Q.16 निम्न में से “विद्यार्थी” शब्द का पर्यायवाची शब्द नहीं है?**

- Ans    ☒ 1. आचार्य  
☒ 2. चेला  
☒ 3. छात्र  
☒ 4. शिष्य

Question ID : 630680606025  
Option 1 ID : 6306802371372  
Option 2 ID : 6306802371371  
Option 3 ID : 6306802371370  
Option 4 ID : 6306802371369

**Comprehension:**

निम्नलिखित गद्यांश को ध्यानपूर्वक पढ़िए और पूछे गए प्रश्न का सही विकल्प चुनिये।  
“विद्यार्थी जीवन ही वह समय है जिसमें बच्चों के चरित्र व्यवहार तथा आचरण को जैसा चाहे वैसा रूप दिया जा सकता है। यह अवस्था वृक्ष की कोमल शाखा की भांति है जिसे जिधर चाहे मोड़ा जा सकता है पूर्णतः विकसित वृक्ष की शाखाओं को मोड़ना संभव नहीं है वह टूट तो सकती है पर मुड़ नहीं सकती। छात्रावस्था सफेद चादर की तरह है जिस पर एक बाहर जो रंग चढ़ गया फिर वह पूर्ववस्था को प्राप्त नहीं हो सकता। इसी अवस्था में सुसंस्कार और सद्गुणियाँ पोषित की जा सकती हैं। इसलिए प्राचीन समय में बालक गुरुकुल में रहकर कठोर अनुशासन का पालन करते थे।”

**SubQuestion No : 17**

**Q.17 छात्रावस्था किस की भांति होती है?**

- Ans    ☒ 1. चंद्रमा के शीतलता की भांति  
☒ 2. हिरण की चंचलता की भांति  
☒ 3. वृक्ष की कोमल शाखा की भांति  
☒ 4. लोहे के वज्र की भांति

Question ID : 630680606027  
Option 1 ID : 6306802371380  
Option 2 ID : 6306802371379  
Option 3 ID : 6306802371377  
Option 4 ID : 6306802371378

**Comprehension:**

निम्नलिखित गद्यांश को ध्यानपूर्वक पढ़िए और पूछे गए प्रश्न का सही विकल्प चुनिये।

“विद्यार्थी जीवन ही वह समय है जिसमें बच्चों के चरित्र व्यवहार तथा आचरण को जैसा चाहे वैसा रूप दिया जा सकता है। यह अवस्था वृक्ष की कोमल शाखा की भांति है जिसे जिधर चाहे मोड़ा जा सकता है पूर्णतः विकसित वृक्ष की शाखाओं को मोड़ना संभव नहीं है वह टूट तो सकती है पर मुड़ नहीं सकती। छात्रावस्था सफेद चादर की तरह है जिस पर एक बाहर जो रंग चढ़ गया फिर वह पूर्वावस्था को प्राप्त नहीं हो सकता। इसी अवस्था में सुसंस्कार और सद्वृत्तियाँ पोषित की जा सकती हैं। इसलिए प्राचीन समय में बालक गुरुकुल में रहकर कठोर अनुशासन का पालन करते थे।”

**SubQuestion No : 18**

**Q.18** जीवन की किस अवस्था में बच्चों के चरित्र व्यवहार तथा आचरण को जैसा चाहे वैसा रूप दिया जा सकता है?

- Ans
- ☒ 1. वृद्ध अवस्था
  - ☒ 2. विद्यार्थी जीवन
  - ☒ 3. वयस्क जीवन
  - ☒ 4. बाल्य अवस्था

Question ID : 630680606023  
Option 1 ID : 6306802371364  
Option 2 ID : 6306802371362  
Option 3 ID : 6306802371363  
Option 4 ID : 6306802371361

**Comprehension:**

निम्नलिखित गद्यांश को ध्यानपूर्वक पढ़िए और पूछे गए प्रश्न का सही विकल्प चुनिये।

“विद्यार्थी जीवन ही वह समय है जिसमें बच्चों के चरित्र व्यवहार तथा आचरण को जैसा चाहे वैसा रूप दिया जा सकता है। यह अवस्था वृक्ष की कोमल शाखा की भांति है जिसे जिधर चाहे मोड़ा जा सकता है पूर्णतः विकसित वृक्ष की शाखाओं को मोड़ना संभव नहीं है वह टूट तो सकती है पर मुड़ नहीं सकती। छात्रावस्था सफेद चादर की तरह है जिस पर एक बाहर जो रंग चढ़ गया फिर वह पूर्वावस्था को प्राप्त नहीं हो सकता। इसी अवस्था में सुसंस्कार और सद्वृत्तियाँ पोषित की जा सकती हैं। इसलिए प्राचीन समय में बालक गुरुकुल में रहकर कठोर अनुशासन का पालन करते थे।”

**SubQuestion No : 19**

**Q.19** प्राचीन समय में बालक कहाँ रहकर कठोर अनुशासन का पालन करते थे?

- Ans
- ☒ 1. गुरुकुल में
  - ☒ 2. जंगल में
  - ☒ 3. विदेश में
  - ☒ 4. घर पर

Question ID : 630680606024  
Option 1 ID : 6306802371367  
Option 2 ID : 6306802371366  
Option 3 ID : 6306802371368  
Option 4 ID : 6306802371365

**Comprehension:**

निम्नलिखित गद्यांश को ध्यानपूर्वक पढ़िए और पूछे गए प्रश्न का सही विकल्प चुनिये।

“विद्यार्थी जीवन ही वह समय है जिसमें बच्चों के चरित्र व्यवहार तथा आचरण को जैसा चाहे वैसा रूप दिया जा सकता है। यह अवस्था वृक्ष की कोमल शाखा की भांति है जिसे जिधर चाहे मोड़ा जा सकता है पूर्णतः विकसित वृक्ष की शाखाओं को मोड़ना संभव नहीं है वह टूट तो सकती है पर मुड़ नहीं सकती। छात्रावस्था सफेद चादर की तरह है जिस पर एक बाहर जो रंग चढ़ गया फिर वह पूर्ववस्था को प्राप्त नहीं हो सकता। इसी अवस्था में सुसंस्कार और सद्गुणियाँ पोषित की जा सकती हैं। इसलिए प्राचीन समय में बालक गुरुकुल में रहकर कठोर अनुशासन का पालन करते थे।”

**SubQuestion No : 20**

**Q.20 छात्रावस्था में निम्न में से कौन सा गुण पोषित किया जाना चाहिए?**

- Ans
- ☒ 1. दुराचार
  - ☒ 2. सुसंस्कार
  - ☒ 3. लालच
  - ☒ 4. हठ

Question ID : 630680606026  
Option 1 ID : 6306802371376  
Option 2 ID : 6306802371373  
Option 3 ID : 6306802371374  
Option 4 ID : 6306802371375

