



Teachingninja.in



Latest Govt Job updates



Private Job updates



Free Mock tests available



Visit - teachingninja.in

DSSSB Asst Gr-III

Previous Year Paper
14 Feb, 2024 Shift 2





GOVT. OF NCT OF DELHI
Delhi Subordinate Services Selection Board
FC-18, Institutional Area, Karkardooma, Delhi – 110092.
www.dsssb.delhigovt.nic.in

Participant ID	
Participant Name	
Test Center Name	
Test Date	14/02/2024
Test Time	12:30 PM - 2:30 PM
Subject	ASSTT GR III

Section : General intelligence and Reasoning Ability 1

Q.1 Based on the class of the following animals/birds, which of the following option is different from the other three options?

- Ans
- ☒ 1. Eagle
 - ☒ 2. Sparrow
 - ☒ 3. Rabbit
 - ☒ 4. Pigeon

Question ID : 630680604112
Option 1 ID : 6306802363907
Option 2 ID : 6306802363905
Option 3 ID : 6306802363906
Option 4 ID : 6306802363904

Q.2 How many such numbers are there in the following series each of which is immediately succeeded by a symbol?

K S B # 9 J 6 \$ V 6 H 4 # (V 4 S S 2 H %

- Ans
- ☒ 1. 3
 - ☒ 2. 0
 - ☒ 3. 1
 - ☒ 4. 2

Question ID : 630680604181
Option 1 ID : 6306802364182
Option 2 ID : 6306802364183
Option 3 ID : 6306802364180
Option 4 ID : 6306802364181

Q.3 How is Khushboo's husband's son's maternal grandfather's wife's only son-in-law's son related to Khushboo?

- Ans
- ☐ 1. Nephew
 - ☐ 2. Brother
 - ☒ 3. Son
 - ☐ 4. Father in law

Question ID : 630680604226
Option 1 ID : 6306802364363
Option 2 ID : 6306802364361
Option 3 ID : 6306802364360
Option 4 ID : 6306802364362

Q.4 Which of the following options will replace the question mark on the basis of sports person and sports?

P. T. Usha : Athletics :: Leander Paes:?

- Ans
- ☐ 1. Athletics
 - ☐ 2. Weightlifting
 - ☒ 3. Lawn Tennis
 - ☐ 4. Badminton

Question ID : 630680604190
Option 1 ID : 6306802364217
Option 2 ID : 6306802364218
Option 3 ID : 6306802364219
Option 4 ID : 6306802364216

Q.5 In a certain code language, COAL is written as DPBM and IRON is written as JSPO. How BORON will be written in the same code?

- Ans
- ☐ 1. NOROB
 - ☒ 2. CPSPO
 - ☐ 3. NORBO
 - ☐ 4. CSPOP

Question ID : 630680604143
Option 1 ID : 6306802364030
Option 2 ID : 6306802364029
Option 3 ID : 6306802364031
Option 4 ID : 6306802364028

Q.6 If all the numbers are deleted from the following series, what will be the thirteenth element from the right?

B 6 # F @ 6 G @ D @ 9 H @ B N # F 2 # J % K 9

- Ans
- ☒ 1. @
 - ☐ 2. G
 - ☐ 3. B
 - ☐ 4. D

Question ID : 630680604102
Option 1 ID : 6306802363864
Option 2 ID : 6306802363865
Option 3 ID : 6306802363867
Option 4 ID : 6306802363866

Q.7 If all the numbers are deleted from the following series, what will be the thirteenth element from the right?

D # 5 H @ J 9 % L 1 # I % K 9 Z ^ 3 S @ 7)

- Ans
- ☒ 1. J
 - ☒ 2. @
 - ☒ 3. %
 - ☒ 4. H

Question ID : 630680604142
Option 1 ID : 6306802364026
Option 2 ID : 6306802364024
Option 3 ID : 6306802364027
Option 4 ID : 6306802364025

Q.8 Which of the following options will replace the question mark on the basis of states and folk dance?

West Bengal: Jatra :: Rajasthan:?

- Ans
- ☒ 1. Chhau
 - ☒ 2. Chakri
 - ☒ 3. Tamasha
 - ☒ 4. Koli

Question ID : 630680604191
Option 1 ID : 6306802364220
Option 2 ID : 6306802364222
Option 3 ID : 6306802364223
Option 4 ID : 6306802364221

Q.9 Pran, Khushi, Rajat, Sana and Tani are five friends live on different floors of the building but not necessarily in the same order.
Khushi lives on the second floor from the top. Sana lives below the floor of Khushi. Tani lives between the floors of Rajat and Sana.
Now, if Pran lives on the top floor, then who lives on the middle floor of the building?

- Ans
- ☒ 1. Khushi
 - ☒ 2. Rajat
 - ☒ 3. Sana
 - ☒ 4. Pran

Question ID : 630680604178
Option 1 ID : 6306802364171
Option 2 ID : 6306802364168
Option 3 ID : 6306802364169
Option 4 ID : 6306802364170

Q.10 In a certain code language, SAD is written as 24 and SON is written as 48. How HAPPY will be written in the same code language?

- Ans
- ☒ 1. 76
 - ☒ 2. 77
 - ☒ 3. 64
 - ☒ 4. 66

Question ID : 630680619950
Option 1 ID : 6306802426336
Option 2 ID : 6306802426335
Option 3 ID : 6306802426333
Option 4 ID : 6306802426334

Q.11 Which of the following options will replace the question mark on the basis of body parts and disease?

Intestine: Colitis :: Eye:?

- Ans
- ✓ 1. Glaucoma
 - ✗ 2. Baldness
 - ✗ 3. Cirrhosis
 - ✗ 4. Eczema

Question ID : 630680604189
Option 1 ID : 6306802364214
Option 2 ID : 6306802364212
Option 3 ID : 6306802364213
Option 4 ID : 6306802364215

Q.12 Read the given statement(s) and conclusions carefully. Assuming that the information given in the statements is true, even if it appears to be at variance with commonly known facts, decide which of the given conclusions logically follow(s) from the statement(s).

Statements:

All cups are bowls.
All bowls are spoons.

Conclusions:

- 1. Some cups are not spoons.
- 2. Some spoons are cups.

- Ans
- ✗ 1. Neither 1 nor 2 follows.
 - ✓ 2. Only 2 conclusion follows.
 - ✗ 3. Both 1 and 2 follow.
 - ✗ 4. Only 1 conclusion follows.

Question ID : 630680604147
Option 1 ID : 6306802364046
Option 2 ID : 6306802364045
Option 3 ID : 6306802364047
Option 4 ID : 6306802364044

Q.13 Arun, Bunny, Charu, Dinu, Raju, and Fiza are six persons live on different floors but not necessarily in the same order. Arun and Raju are on the top and bottom floor respectively. Bunny lives on the floor between Arun and Charu. Dinu lives between the floors of Charu and Fiza. Who lives at the second floor from the bottom?





- Ans
- ✗ 1. Bunny
 - ✓ 2. Fiza
 - ✗ 3. Arun
 - ✗ 4. Dinu

Question ID : 630680604097
Option 1 ID : 6306802363845
Option 2 ID : 6306802363846
Option 3 ID : 6306802363844
Option 4 ID : 6306802363847

Q.14 Read the given statement(s) and conclusions carefully. Assuming that the information given in the statements is true, even if it appears to be at variance with commonly known facts, decide which of the given conclusions logically follow(s) from the statement(s).

Statements:
All lamps are kerosene.
All kerosene are balls.

Conclusions:
1. Some balls are lamps.
2. All kerosene are lamps.

- Ans**  1. Only 1 conclusion follows.
 2. Only 2 conclusion follows.
 3. Both 1 and 2 follow.
 4. Neither 1 nor 2 follows.

Question ID : 630680604148
Option 1 ID : 6306802364048
Option 2 ID : 6306802364049
Option 3 ID : 6306802364051
Option 4 ID : 6306802364050

Q.15 5 girls namely Arohi, Babbi, Rani, Kavita and Prachi are sitting in a straight line facing north. Babbi is sitting immediately after Arohi. Kavita is not on either end of the line. Arohi is not sitting on the extreme right end of the line. If Prachi is sitting immediately before Rani from the right-hand side of the row, then who is sitting in the middle of the row?

- Ans**  1. Prachi
 2. Kavita
 3. Babbi
 4. Arohi

Question ID : 630680604213
Option 1 ID : 6306802364311
Option 2 ID : 6306802364310
Option 3 ID : 6306802364309
Option 4 ID : 6306802364308

Q.16 How many such letters are there in the given series each of which is immediately followed by a symbol?

T 8 A 9 S N 4 & L 1 V & S % Q 3 N 0 Q % V

- Ans**  1. 2
 2. 0
 3. 3
 4. 1

Question ID : 630680604179
Option 1 ID : 6306802364174
Option 2 ID : 6306802364172
Option 3 ID : 6306802364175
Option 4 ID : 6306802364173

Q.17 Shyam went to watch the movie 9 days ago. He goes to watch movies only on Sunday, what is the day of the week today?

- Ans
- ☒ 1. Wednesday
 - ☒ 2. Friday
 - ☒ 3. Monday
 - ☒ 4. Saturday

Question ID : 630680604096
Option 1 ID : 6306802363843
Option 2 ID : 6306802363841
Option 3 ID : 6306802363840
Option 4 ID : 6306802363842

Q.18 Five men Vineet, Ramu, Shobhit, Narang and Madan are sitting in a row facing north. Shobhit is sitting immediately between Vineet and Ramu. Narang is sitting immediately between Ramu and Madan. Madan is sitting on the right end of the row. Who is sitting immediately to the right of Ramu?

- Ans
- ☒ 1. Narang
 - ☒ 2. Vineet
 - ☒ 3. shobhit
 - ☒ 4. Ramu

Question ID : 630680604055
Option 1 ID : 6306802363678
Option 2 ID : 6306802363677
Option 3 ID : 6306802363676
Option 4 ID : 6306802363679

Q.19 Five friends are sitting on a bench for a group photo. Sameer is sitting immediately to the left of Raja and immediately to the right of Vinay. Mala is sitting immediately to the right of Kajal. Kajal is sitting immediately between Raja and Mala. Who is sitting in the middle of the group photo?

- Ans
- ☒ 1. Sameer
 - ☒ 2. Mala
 - ☒ 3. Raja
 - ☒ 4. Kajal

Question ID : 630680619928
Option 1 ID : 6306802425796
Option 2 ID : 6306802425794
Option 3 ID : 6306802425795
Option 4 ID : 6306802425793

Q.20 अंकित के शिक्षक के भाई की बेटी के पति का बेटा अंकित से किस प्रकार संबंधित है?

- Ans
- ☒ 1. कोई संबंध नहीं
 - ☒ 2. सगा चाचा
 - ☒ 3. सगा भाई
 - ☒ 4. सगा भतीजा

Question ID : 630680604185
Option 1 ID : 6306802364199
Option 2 ID : 6306802364198
Option 3 ID : 6306802364196
Option 4 ID : 6306802364197

Q.1 Which of the following options will replace the question mark in the figure given below?



X.

1.

2.

3.

4.

Ans

☒ 1. 4

☒ 2. 1

☒ 3. 3

☒ 4. 2

Question ID : 630680604078
Option 1 ID : 6306802363771
Option 2 ID : 6306802363768
Option 3 ID : 6306802363770
Option 4 ID : 6306802363769

Q.2 If 'M' denotes '×', 'D' denotes '+', 'A' denotes '+', 'S' denotes '-' Then what will be the value of the following expression?

4 S 8 D 2 A 5 M 9

Ans

☒ 1. 43

☒ 2. 54

☒ 3. 45

☒ 4. 34

Question ID : 630680619956
Option 1 ID : 6306802426358
Option 2 ID : 6306802426360
Option 3 ID : 6306802426359
Option 4 ID : 6306802426357

Q.3 On the basis of India and international regional groups and their types, which of the following options is different from the other three options?

Ans

☒ 1. European Union

☒ 2. G-20

☒ 3. BIMSTEC

☒ 4. SAARC

Question ID : 630680604154
Option 1 ID : 6306802364074
Option 2 ID : 6306802364075
Option 3 ID : 6306802364073
Option 4 ID : 6306802364072

Q.4 What will come in place of the question mark (?) to make the series given below logically complete?

6, 9, 18, 21, 42, 45, 90, ?, ?

- Ans
- ☐ 1. 96, 189
 - ☐ 2. 189, 95
 - ☐ 3. 186, 93
 - ☒ 4. 93, 186

Question ID : 630680604046
Option 1 ID : 6306802363642
Option 2 ID : 6306802363643
Option 3 ID : 6306802363641
Option 4 ID : 6306802363640

Q.5 Which of the following option is similar to the expression given below?

23 : 9 : 207

- Ans
- ☐ 1. 17 : 9 : 140
 - ☐ 2. 16 : 9 : 146
 - ☐ 3. 29 : 12 : 312
 - ☒ 4. 28 : 7 : 196

Question ID : 630680619966
Option 1 ID : 6306802425865
Option 2 ID : 6306802425866
Option 3 ID : 6306802425868
Option 4 ID : 6306802425867

Q.6 If '+' means '-', '×' means '/', '-' means '+' and '/' means '×' then find out the answer of the following expression.

$9 / 6 + 40 - 42 \times 2$

- Ans
- ☐ 1. 36
 - ☐ 2. 37
 - ☒ 3. 35
 - ☐ 4. 34

Question ID : 630680604243
Option 1 ID : 6306802364430
Option 2 ID : 6306802364431
Option 3 ID : 6306802364429
Option 4 ID : 6306802364428

Q.7 Which of the following options is different from the other three options?

- Ans
- ☐ 1. Tomato
 - ☐ 2. Potato
 - ☒ 3. Rose
 - ☐ 4. ladyfinger

Question ID : 630680604034
Option 1 ID : 6306802363595
Option 2 ID : 6306802363592
Option 3 ID : 6306802363593
Option 4 ID : 6306802363594

Q.8 Which among the following option from the answer figures will be the mirror image of the question figure, when the mirror is held at XY?

Question figure:



Answer figures:

- (1) 813180 (2) 813180
(3) 081818 (4) 081318

Ans ☒ 1. 4
☐ 2. 3
☐ 3. 2
☐ 4. 1

Question ID : 630680604240
Option 1 ID : 6306802364419
Option 2 ID : 6306802364418
Option 3 ID : 6306802364417
Option 4 ID : 6306802364416

Q.9 What will be value of the following expression?

$$3.39 + 7.34 + 8.62 + 4.23 = ?$$

Ans ☐ 1. 23.85
☒ 2. 23.58
☐ 3. 21.85
☐ 4. 21.58

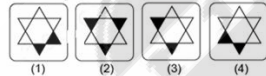
Question ID : 630680604088
Option 1 ID : 6306802363808
Option 2 ID : 6306802363809
Option 3 ID : 6306802363811
Option 4 ID : 6306802363810

Q.10 Which among the following option from the answer figures will be the mirror image of the question figure, when the mirror is held at XY?

Question figure:



Answer figures:



Ans ☐ 1. 2
☒ 2. 3
☐ 3. 4
☐ 4. 1

Question ID : 630680604161
Option 1 ID : 6306802364101
Option 2 ID : 6306802364102
Option 3 ID : 6306802364103
Option 4 ID : 6306802364100

Q.11 Which of the following option is similar to the expression given below?

54: 73

- Ans
- ☒ 1. 53 : 43
 - ☒ 2. 45 : 65
 - ☒ 3. 23: 101
 - ☒ 4. 63 : 82

Question ID : 630680604132
Option 1 ID : 6306802363984
Option 2 ID : 6306802363987
Option 3 ID : 6306802363985
Option 4 ID : 6306802363986

Q.12 What will come in the place of question mark (?) to make the series given below logically complete?

L 32, K 51, J 70, I 89, H 108, ??

- Ans
- ☒ 1. G 127
 - ☒ 2. G 129
 - ☒ 3. F 127
 - ☒ 4. F 129

Question ID : 630680604116
Option 1 ID : 6306802363921
Option 2 ID : 6306802363923
Option 3 ID : 6306802363920
Option 4 ID : 6306802363922


Q.13 What will come in the place of question mark (?) to make the series given below logically complete?

E 32, C 64, A 96, Y 128, ?

- Ans
- ☒ 1. X 160
 - ☒ 2. Y 160
 - ☒ 3. W 160
 - ☒ 4. Z 160

Question ID : 630680604076
Option 1 ID : 6306802363760
Option 2 ID : 6306802363762
Option 3 ID : 6306802363761
Option 4 ID : 6306802363763

Q.14 Find the figure which is different from the rest figure options given below.



1 2 3 4

Ans ☒ 1. 3

☐ 2. 2

☐ 3. 4

☐ 4. 1

Question ID : 630680604082

Option 1 ID : 6306802363786

Option 2 ID : 6306802363785

Option 3 ID : 6306802363787

Option 4 ID : 6306802363784

Q.15 Which of the following pair is similar to the expression given below?

869 : 23

Ans ☐ 1. 280 : 12

☐ 2. 344 : 10

☒ 3. 396 : 18

☐ 4. 234 : 10

Question ID : 630680604131

Option 1 ID : 6306802363981

Option 2 ID : 6306802363982

Option 3 ID : 6306802363983

Option 4 ID : 6306802363980

Q.16 Based on the food nature of the following animals, which of the following option is different from the other three options?

Ans ☐ 1. Jackal

☒ 2. Cow

☐ 3. Lion

☐ 4. Tiger

Question ID : 630680604032

Option 1 ID : 6306802363584

Option 2 ID : 6306802363585

Option 3 ID : 6306802363587

Option 4 ID : 6306802363586

Q.17 Which of the following option is similar to the expression given below?

28 : 784

- Ans
- ☒ 1. 29 : 845
 - ☒ 2. 30 : 890
 - ☒ 3. 23 : 539
 - ☒ 4. 33 : 1089

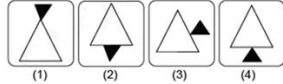
Question ID : 630680604130
Option 1 ID : 6306802363978
Option 2 ID : 6306802363977
Option 3 ID : 6306802363979
Option 4 ID : 6306802363976

Q.18 Which among the following option from the answer figures will be the mirror image of the question figure, when the mirror is held at XY?

Question figure:



Answer figures:



- Ans
- ☒ 1. 3
 - ☒ 2. 1
 - ☒ 3. 2
 - ☒ 4. 4

Question ID : 630680604120
Option 1 ID : 6306802363938
Option 2 ID : 6306802363936
Option 3 ID : 6306802363937
Option 4 ID : 6306802363939

Q.19 What will come in place of the question mark (?) to make the series given below logically complete?

18, 22, 30, 34, 42, ?, ?

- Ans
- ☒ 1. 66, 58
 - ☒ 2. 58, 66
 - ☒ 3. 54, 46
 - ☒ 4. 46, 54

Question ID : 630680604247
Option 1 ID : 6306802364447
Option 2 ID : 6306802364446
Option 3 ID : 6306802364445
Option 4 ID : 6306802364444

Q.20 If ‘\$’ means ‘-’, ‘*’ means ‘+’, ‘@’ means ‘÷’, ‘#’ means ‘×’, then what will be the value of the following expression?

$1 \# 9 * 99 @ 9 \$ 11 = ?$

- Ans
- ☒ 1. 10
 - ☒ 2. 7
 - ☒ 3. 11
 - ☒ 4. 9

Question ID : 630680604124
Option 1 ID : 6306802363953
Option 2 ID : 6306802363955
Option 3 ID : 6306802363954
Option 4 ID : 6306802363952

Section : General Awareness 1

Q.1 Which of the following organizations was founded by Swami Vivekananda in 1897?

- Ans
- ☒ 1. Brahmo Samaj
 - ☒ 2. Ramakrishna Mission
 - ☒ 3. Arya Samaj
 - ☒ 4. Paramhansa Mandali

Question ID : 630680604446
Option 1 ID : 6306802365244
Option 2 ID : 6306802365247
Option 3 ID : 6306802365245
Option 4 ID : 6306802365246

Q.2 Charvaka philosophy deals with the _____philosophy.

- Ans
- ☒ 1. Non-violence
 - ☒ 2. Spiritualistic
 - ☒ 3. Materialistic
 - ☒ 4. Humanistic

Question ID : 630680604530
Option 1 ID : 6306802365583
Option 2 ID : 6306802365581
Option 3 ID : 6306802365580
Option 4 ID : 6306802365582

Q.3 The National Green Tribunal has been established in which of the following year?

- Ans
- ☒ 1. 2010
 - ☒ 2. 2011
 - ☒ 3. 2008
 - ☒ 4. 2015

Question ID : 630680619984
Option 1 ID : 6306802425934
Option 2 ID : 6306802425936
Option 3 ID : 6306802425933
Option 4 ID : 6306802425935

Q.4 Sutta Pitaka is related to which of the following?

Ans ☒ 1. Buddha's sermon or doctrines

☐ 2. Rules of the order

☐ 3. Buddhist philosophy

☐ 4. Buddha's birth story

Question ID : 630680604490
Option 1 ID : 6306802365420
Option 2 ID : 6306802365421
Option 3 ID : 6306802365422
Option 4 ID : 6306802365423

Q.5 What is the name of the lander included in Chandrayaan-3 recently launched by ISRO?

Ans ☒ 1. Vikram

☐ 2. Vikas

☐ 3. Pragyan

☐ 4. Vishwa

Question ID : 630680604474
Option 1 ID : 6306802365358
Option 2 ID : 6306802365357
Option 3 ID : 6306802365359
Option 4 ID : 6306802365356

Q.6 Who among the following rulers invaded India 17 times during AD 1000–1026?

Ans ☐ 1. Mohammad bin Qasim

☐ 2. Babar

☐ 3. Mohammad Ghori

☒ 4. Mahmud Ghazni

Question ID : 630680604327
Option 1 ID : 6306802364771
Option 2 ID : 6306802364769
Option 3 ID : 6306802364768
Option 4 ID : 6306802364770

Q.7 In which of the following states, seed farm is declared as India's first carbon neutral farm?

Ans ☐ 1. Maharashtra

☒ 2. Kerala

☐ 3. Tamil Nadu

☐ 4. Sikkim

Question ID : 630680604516
Option 1 ID : 6306802365526
Option 2 ID : 6306802365525
Option 3 ID : 6306802365524
Option 4 ID : 6306802365527

Q.8 In which of the following years, Kudumbashree – a women-oriented community-based poverty alleviation program – was implemented in Kerala.

Ans ☒ 1. 1995

☒ 2. 1996

☒ 3. 1997

☒ 4. 1994

Question ID : 630680604362

Option 1 ID : 6306802364909

Option 2 ID : 6306802364910

Option 3 ID : 6306802364911

Option 4 ID : 6306802364908

Q.9 Who among the following has composed the play Neel Darpan?

Ans ☒ 1. Raja Ram Mohan Roy

☒ 2. Swami Dayanand Saraswati

☒ 3. Deenbandhu Mitra

☒ 4. Bankim Chandra Chatterjee

Question ID : 630680604364

Option 1 ID : 6306802364919

Option 2 ID : 6306802364918

Option 3 ID : 6306802364916

Option 4 ID : 6306802364917

Q.10 _____ is development that meets the need of the present generation without compromising the ability of the future generation to meet their own needs.

Ans ☒ 1. Sustainable development

☒ 2. Inclusive development

☒ 3. Veritable development

☒ 4. Environmental development

Question ID : 630680604483

Option 1 ID : 6306802365392

Option 2 ID : 6306802365393

Option 3 ID : 6306802365395

Option 4 ID : 6306802365394

Q.11 Which of the following states hosted the 37th National Games - 2023?

Ans ☒ 1. Goa

☒ 2. Sikkim

☒ 3. Haryana

☒ 4. Punjab

Question ID : 630680604311

Option 1 ID : 6306802364707

Option 2 ID : 6306802364706

Option 3 ID : 6306802364704

Option 4 ID : 6306802364705

Q.12 Which of the following production units are covered under primary sector of economics?

Ans

✖ 1. Banking

✖ 2. Manufacturing

✔ 3. Forestry

✖ 4. Communication

Question ID : 630680604481

Option 1 ID : 6306802365387

Option 2 ID : 6306802365384

Option 3 ID : 6306802365385

Option 4 ID : 6306802365386

Q.13 National Sickle Cell Anaemia Elimination Mission was launched in which of the following states?

Ans

✖ 1. Uttar Pradesh

✔ 2. Madhya Pradesh

✖ 3. Andhra Pradesh

✖ 4. Jharkhand

Question ID : 630680604438

Option 1 ID : 6306802365212

Option 2 ID : 6306802365213

Option 3 ID : 6306802365214

Option 4 ID : 6306802365215

Q.14 Iltutmish nominated _____ as his successor?

Ans

✖ 1. Malik Jamaluddin

✖ 2. Ruknuddin Firoz

✖ 3. Nasiruddin Mahmud

✔ 4. Raziya Sultan

Question ID : 630680604368

Option 1 ID : 6306802364932

Option 2 ID : 6306802364933

Option 3 ID : 6306802364935

Option 4 ID : 6306802364934

Q.15 What does SLR means in the context of banking?

Ans

✖ 1. Statutory Liability Ratio

✖ 2. Statutory Legal Ratio

✖ 3. Statutory Limited Ratio

✔ 4. Statutory Liquidity Ratio

Question ID : 630680604359

Option 1 ID : 6306802364899

Option 2 ID : 6306802364898

Option 3 ID : 6306802364897

Option 4 ID : 6306802364896

Q.16 The vision of 'Prosperity through Cooperation' of the Government of India is related to the reform of which of the following sectors?

- Ans ☒ 1. Cooperative sector
☐ 2. Health sector
☐ 3. Agriculture sector
☐ 4. Education sector

Question ID : 630680604437
Option 1 ID : 6306802365211
Option 2 ID : 6306802365209
Option 3 ID : 6306802365210
Option 4 ID : 6306802365208

Q.17 Which among the following measures of money supply is also referred to as most liquid money supply in India?

- Ans ☐ 1. M3
☐ 2. M0
☒ 3. M1
☐ 4. M2

Question ID : 630680604559
Option 1 ID : 6306802365698
Option 2 ID : 6306802365699
Option 3 ID : 6306802365696
Option 4 ID : 6306802365697

Q.18 Researchers at Indian Institute of Technology Madras have launched indigenously developed polycentric prosthetic knee, what name has it been given?

- Ans ☐ 1. Sambhavna
☐ 2. Prayas
☒ 3. Kadam
☐ 4. Koshish

Question ID : 630680604433
Option 1 ID : 6306802365195
Option 2 ID : 6306802365192
Option 3 ID : 6306802365193
Option 4 ID : 6306802365194

Q.19 Which of the following states has won the Raja Bhalindra Singh Trophy in the 37th National Games held in Goa in the year – 2023?

- Ans ☐ 1. Uttarakhand
☒ 2. Maharashtra
☐ 3. Haryana
☐ 4. Himachal Pradesh

Question ID : 630680619997
Option 1 ID : 6306802425987
Option 2 ID : 6306802425985
Option 3 ID : 6306802425988
Option 4 ID : 6306802425986

Q.20 In which of the following years was the Khilafat Movement started?

- Ans ☒ 1. 1919-20
- ☐ 2. 1909-10
- ☐ 3. 1929-30
- ☐ 4. 1924-25

Question ID : 630680604325
Option 1 ID : 6306802364760
Option 2 ID : 6306802364762
Option 3 ID : 6306802364761
Option 4 ID : 6306802364763

Section : General Awareness 2

Q.1 Punjab Himalayas lies between which of the following two rivers?

- Ans ☐ 1. Between Tista and Dihang rivers
- ☐ 2. Between the Kali and Tista rivers
- ☐ 3. Between Satluj and Kali rivers
- ☒ 4. Between Indus and Satluj rivers

Question ID : 630680604335
Option 1 ID : 6306802364803
Option 2 ID : 6306802364802
Option 3 ID : 6306802364800
Option 4 ID : 6306802364801

Q.2 How many years is the tenure of Lok Sabha generally?

- Ans ☒ 1. 5 years
- ☐ 2. 4 years
- ☐ 3. 6 years
- ☐ 4. 7 years

Question ID : 630680604462
Option 1 ID : 6306802365309
Option 2 ID : 6306802365308
Option 3 ID : 6306802365310
Option 4 ID : 6306802365311

Q.3 The rivers, after descending from the mountains deposit pebbles in a narrow belt of about 8 to 16 km in width lying parallel to the slopes of the Shiwaliks. It is called as _____.

- Ans ☐ 1. Bhangar
- ☐ 2. Terai
- ☐ 3. Khadar
- ☒ 4. Bhabar

Question ID : 630680604417
Option 1 ID : 6306802365128
Option 2 ID : 6306802365131
Option 3 ID : 6306802365129
Option 4 ID : 6306802365130

Q.4 Which of the following is NOT an advantage of using bio-diesel as fuel?

- Ans ☒ 1. It is produced from a plant
☒ 2. Danger of increasing pollution
☒ 3. Its use is safe
☒ 4. Emits less carbon monoxide

Question ID : 630680604589
Option 1 ID : 6306802365817
Option 2 ID : 6306802365818
Option 3 ID : 6306802365816
Option 4 ID : 6306802365819

Q.5 On which of the following dates was the Indian Constitution was adopted?

- Ans ☒ 1. 15 August, 1949
☒ 2. 26 November, 1949
☒ 3. 15 August, 1947
☒ 4. 26 November, 1947

Question ID : 630680604340
Option 1 ID : 6306802364822
Option 2 ID : 6306802364823
Option 3 ID : 6306802364820
Option 4 ID : 6306802364821

Q.6 Gudi Padwa festival is mainly celebrated in which of the following state of India?

- Ans ☒ 1. Manipur
☒ 2. Maharashtra
☒ 3. Meghalaya
☒ 4. Mizoram

Question ID : 630680604374
Option 1 ID : 6306802364959
Option 2 ID : 6306802364957
Option 3 ID : 6306802364958
Option 4 ID : 6306802364956

Q.7 How many types of justice have been discussed in the Preamble of the Indian Constitution?

- Ans ☒ 1. 4
☒ 2. 5
☒ 3. 6
☒ 4. 3

Question ID : 630680604461
Option 1 ID : 6306802365304
Option 2 ID : 6306802365306
Option 3 ID : 6306802365305
Option 4 ID : 6306802365307

Q.8 Official languages in India are part of which of the following schedule of Indian Constitution?

- Ans
- ☒ 1. Sixth
 - ☒ 2. Seventh
 - ☒ 3. Ninth
 - ☒ 4. Eighth

Question ID : 630680620003
Option 1 ID : 6306802426009
Option 2 ID : 6306802426010
Option 3 ID : 6306802426012
Option 4 ID : 6306802426011

Q.9 Sonpur Cattle Fair is organized in which of the following states?

- Ans
- ☒ 1. Bihar
 - ☒ 2. Maharashtra
 - ☒ 3. Haryana
 - ☒ 4. Sikkim

Question ID : 630680604573
Option 1 ID : 6306802365752
Option 2 ID : 6306802365753
Option 3 ID : 6306802365754
Option 4 ID : 6306802365755

Q.10 Which of the following is not a method for conservation of soil?

- Ans
- ☒ 1. Deforestation
 - ☒ 2. Afforestation
 - ☒ 3. Contour Ploughing
 - ☒ 4. Control on grazing

Question ID : 630680619995
Option 1 ID : 6306802425977
Option 2 ID : 6306802425980
Option 3 ID : 6306802425979
Option 4 ID : 6306802425978

Q.11 Which of the following animal is not a hoofed mammal?

- Ans
- ☒ 1. Cow
 - ☒ 2. Deer
 - ☒ 3. Sheep
 - ☒ 4. Lion

Question ID : 630680619982
Option 1 ID : 6306802425926
Option 2 ID : 6306802425927
Option 3 ID : 6306802425928
Option 4 ID : 6306802425925

Q.12 Kumaon Himalayas lies between which of the following two rivers?

- Ans
- ☒ 1. Between Indus and Satluj rivers
 - ☒ 2. Between Satluj and Kali rivers
 - ☒ 3. Between the Kali and Tista rivers
 - ☒ 4. Between Tista and Dihang rivers

Question ID : 630680604375
Option 1 ID : 6306802364961
Option 2 ID : 6306802364960
Option 3 ID : 6306802364962
Option 4 ID : 6306802364963

Q.13 Which of the following animal is characterised by the presence of 4 chambered heart?

- Ans
- ☒ 1. Crocodile
 - ☒ 2. Snake
 - ☒ 3. Fish
 - ☒ 4. Tortoise

Question ID : 630680604548
Option 1 ID : 6306802365653
Option 2 ID : 6306802365655
Option 3 ID : 6306802365652
Option 4 ID : 6306802365654

Q.14 According to the final data of 2011 census, which of the following states has the highest population density?

- Ans
- ☒ 1. Karnataka
 - ☒ 2. Kerala
 - ☒ 3. Maharashtra
 - ☒ 4. Bihar

Question ID : 630680619970
Option 1 ID : 6306802425877
Option 2 ID : 6306802425879
Option 3 ID : 6306802425880
Option 4 ID : 6306802425878

Q.15 Which of the following is true about Lok Sabha and Rajya Sabha?

- Ans
- ☒ 1. The Rajya Sabha is called as House of the people.
 - ☒ 2. The President nominates 12 members to the Rajya Sabha.
 - ☒ 3. Lok Sabha is called as Council of the states.
 - ☒ 4. The Lok Sabha is never dissolved.

Question ID : 630680604385
Option 1 ID : 6306802365000
Option 2 ID : 6306802365003
Option 3 ID : 6306802365001
Option 4 ID : 6306802365002

Q.16 Which of the following animal is a parasite of human intestine?

- Ans
- ☒ 1. Liver fluke
 - ☒ 2. Star fish
 - ☒ 3. Tapeworm
 - ☒ 4. Fasciola

Question ID : 630680604506
Option 1 ID : 6306802365484
Option 2 ID : 6306802365487
Option 3 ID : 6306802365485
Option 4 ID : 6306802365486

Q.17 Which of the following State/Union territory witnessed population density of 860 persons per square Km as per final data of 2011 census?

- Ans
- ☒ 1. Bihar
 - ☒ 2. Kerala
 - ☒ 3. Uttar Pradesh
 - ☒ 4. West Bengal

Question ID : 630680604498
Option 1 ID : 6306802365453
Option 2 ID : 6306802365454
Option 3 ID : 6306802365452
Option 4 ID : 6306802365455

Q.18 President nominates how many members to the Rajya Sabha having special knowledge in the field of literature, science, art and social service?

- Ans
- ☒ 1. 12 members
 - ☒ 2. 11 members
 - ☒ 3. 13 members
 - ☒ 4. 10 members

Question ID : 630680604504
Option 1 ID : 6306802365478
Option 2 ID : 6306802365477
Option 3 ID : 6306802365479
Option 4 ID : 6306802365476

Q.19 Based on the information available till 26 January 1950, how many languages were included in the 8th Schedule of the Indian Constitution?

- Ans
- ☒ 1. 18
 - ☒ 2. 15
 - ☒ 3. 14
 - ☒ 4. 22

Question ID : 630680604452
Option 1 ID : 6306802365270
Option 2 ID : 6306802365269
Option 3 ID : 6306802365268
Option 4 ID : 6306802365271

Q.20 ____ has the power to dissolve the Lok Sabha even before the expiry of its term on the recommendation of the_____.

- Ans ☒ 1. President, Prime Minister
☐ 2. President, CJI
☐ 3. President, Vice-President
☐ 4. President, Rajya Sabha

Question ID : 630680620005
Option 1 ID : 6306802426017
Option 2 ID : 6306802426019
Option 3 ID : 6306802426018
Option 4 ID : 6306802426020

Section : Arithmetical and Numerical Ability 1

Q.1 A farmer gets a loan of ₹ 180000 against his fixed deposits. If the rate of interest is 1.5 paise per rupee per annum, calculate the compound interest payable after 2 years.

- Ans ☐ 1. ₹ 5870.5
☐ 2. ₹ 54400.5
☐ 3. ₹ 58700.5
☒ 4. ₹ 5440.5

Question ID : 630680603757
Option 1 ID : 6306802362484
Option 2 ID : 6306802362487
Option 3 ID : 6306802362486
Option 4 ID : 6306802362485

Q.2 A car owner buys petrol at ₹70, ₹ 80 and ₹90 per litre for three successive years. What approximately is the average cost per litre of petrol if he spends ₹25200 each year.

- Ans ☐ 1. ₹ 81.23
☐ 2. ₹ 75.44
☒ 3. ₹ 79.16
☐ 4. ₹ 76.89

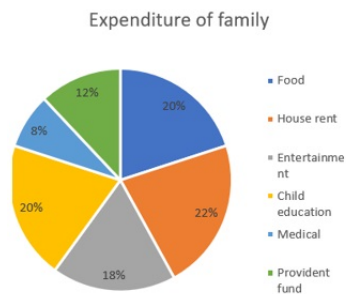
Question ID : 630680603914
Option 1 ID : 6306802363115
Option 2 ID : 6306802363112
Option 3 ID : 6306802363114
Option 4 ID : 6306802363113

Q.3 Which of the following is the same as the number x^7 ?

- Ans ☒ 1. x^{10}/x^3
☐ 2. x^7/x^1
☐ 3. $x^7 * x$
☐ 4. $x^4 + x^3$

Question ID : 630680603922
Option 1 ID : 6306802363145
Option 2 ID : 6306802363146
Option 3 ID : 6306802363144
Option 4 ID : 6306802363147

- Q.4** Study the chart and answer the questions: The pie chart given here represents the domestic expenditure of a family in percent. Study the chart and answer the following questions if the total monthly income of the family is ₹ 65,600.



How much is the medical expense per month?

- Ans**
- ☒ 1. ₹ 5200
 - ☒ 2. ₹ 7872
 - ☒ 3. ₹ 6560
 - ☒ 4. ₹ 5248

Question ID : 630680603919
Option 1 ID : 6306802363132
Option 2 ID : 6306802363135
Option 3 ID : 6306802363134
Option 4 ID : 6306802363133

- Q.5** Find the least number, which when divided by 14, 15, 20 and 48 leaves a remainder of 8 in each case.

- Ans**
- ☒ 1. 1688
 - ☒ 2. 3245
 - ☒ 3. 4426
 - ☒ 4. 1268

Question ID : 630680603926
Option 1 ID : 6306802363163
Option 2 ID : 6306802363161
Option 3 ID : 6306802363160
Option 4 ID : 6306802363162

- Q.6** The average age of husband, wife and their child 4 years ago was 25 years and that of wife and the child 5 years ago was 22 years. The present age of the husband is:

- Ans**
- ☒ 1. 33 years
 - ☒ 2. 38 years
 - ☒ 3. 41 years
 - ☒ 4. 46 years

Question ID : 630680603913
Option 1 ID : 6306802363111
Option 2 ID : 6306802363110
Option 3 ID : 6306802363109
Option 4 ID : 6306802363108

Q.7 $\sqrt{49} \times \sqrt{256}$ किसके बराबर है?

- Ans
- ☐ 1. 22
 - ☐ 2. 25
 - ☐ 3. 20
 - ☒ 4. 23

Question ID : 630680603923
Option 1 ID : 6306802363149
Option 2 ID : 6306802363151
Option 3 ID : 6306802363148
Option 4 ID : 6306802363150

Q.8 The difference between the greatest and the least four-digit numbers that begins with 6 and ends with 8 is.

- Ans
- ☒ 1. 990
 - ☐ 2. 900
 - ☐ 3. 999
 - ☐ 4. 940

Question ID : 630680603766
Option 1 ID : 6306802362522
Option 2 ID : 6306802362520
Option 3 ID : 6306802362523
Option 4 ID : 6306802362521

Q.9 If the simple interest for 2 years is ₹ 6800 at 10% rate of interest. Find the compound interest for the same time.

- Ans
- ☐ 1. ₹ 7980
 - ☐ 2. ₹ 11560
 - ☒ 3. ₹ 7140
 - ☐ 4. ₹ 10000

Question ID : 630680619894
Option 1 ID : 6306802426290
Option 2 ID : 6306802426292
Option 3 ID : 6306802426289
Option 4 ID : 6306802426291

Q.10 In how many years will ₹ 8000 grow to ₹ 12000 at 5% simple interest?

- Ans
- ☐ 1. 7.5 years
 - ☐ 2. 12 years
 - ☐ 3. 8.5 years
 - ☒ 4. 10 years

Question ID : 630680603755
Option 1 ID : 6306802362476
Option 2 ID : 6306802362479
Option 3 ID : 6306802362477
Option 4 ID : 6306802362478

Q.11 If the cost price of an article is 68 % of the selling price, what is the profit percent?

- Ans
- ☐ 1. 50 %
 - ☐ 2. 54 %
 - ☒ 3. 47 %
 - ☐ 4. 40 %

Question ID : 630680619914
Option 1 ID : 6306802425737
Option 2 ID : 6306802425739
Option 3 ID : 6306802425740
Option 4 ID : 6306802425738

Q.12 The difference between two numbers is 1440. If 6 % of one number is 10 % of the other number, then find the two numbers

- Ans
- ☐ 1. 2500,3200
 - ☒ 2. 3600, 2160
 - ☐ 3. 3240,4160
 - ☐ 4. 2240,3560

Question ID : 630680603929
Option 1 ID : 6306802363173
Option 2 ID : 6306802363175
Option 3 ID : 6306802363174
Option 4 ID : 6306802363172

Q.13 The compound interest on ₹10,000 at 3% per annum is ₹ 609. The period (in years) is:

- Ans
- ☒ 1. 2 years
 - ☐ 2. 8 years
 - ☐ 3. 4 years
 - ☐ 4. 5 years

Question ID : 630680603836
Option 1 ID : 6306802362800
Option 2 ID : 6306802362801
Option 3 ID : 6306802362803
Option 4 ID : 6306802362802

Q.14 If A's height is 12% more than B's height, by how much per cent less is B's height than that of A?

- Ans
- ☐ 1. 14.5%
 - ☐ 2. 9.66%
 - ☐ 3. 12.56%
 - ☒ 4. 10.71%

Question ID : 630680603889
Option 1 ID : 6306802363012
Option 2 ID : 6306802363015
Option 3 ID : 6306802363013
Option 4 ID : 6306802363014

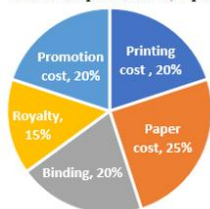
Q.15 यदि दो मान तीसरे मान का 15% और 30% हैं, तो पहला मान दूसरे मान का कितना प्रतिशत है?

- Ans
- ☐ 1. 25%
 - ☐ 2. 40%
 - ☐ 3. 35%
 - ☒ 4. 50%

Question ID : 630680603851
Option 1 ID : 6306802362863
Option 2 ID : 6306802362862
Option 3 ID : 6306802362860
Option 4 ID : 6306802362861

Q.16 The following pie-chart shows the percentage distribution of the expenditure incurred in publishing a book. Study the pie-chart and the answer the question based on it.

Various Expenditures (in percentage)



If for a certain quantity of books, the publisher has to pay ₹ 10,800 as printing cost, then what will be amount of paper cost to be paid for these books?

- Ans
- ☐ 1. ₹ 11500
 - ☒ 2. ₹ 13500
 - ☐ 3. ₹ 12600
 - ☐ 4. ₹ 15300

Question ID : 630680603760
Option 1 ID : 6306802362496
Option 2 ID : 6306802362498
Option 3 ID : 6306802362497
Option 4 ID : 6306802362499



Q.17 The table given below shows the marked price and discount percentage of 6 different articles.

Article	Marked Price	Discount percentage
A	1500	20 %
B	3000	15 %
C	1800	25 %
D	2200	30 %
E	2600	10 %
F	2900	15 %

Find difference between selling price of article B and E.

- Ans ☒ 1. 210
☐ 2. 195
☐ 3. 400
☐ 4. 340

Question ID : 630680603761
Option 1 ID : 6306802362501
Option 2 ID : 6306802362500
Option 3 ID : 6306802362503
Option 4 ID : 6306802362502

Q.18 Which of the following is the unit digit in the product of $473 \times 512 \times 826 \times 1446$?

- Ans ☐ 1. 2
☐ 2. 4
☐ 3. 8
☒ 4. 6

Question ID : 630680603723
Option 1 ID : 6306802362348
Option 2 ID : 6306802362349
Option 3 ID : 6306802362351
Option 4 ID : 6306802362350

Q.19 The price of cooking oil has increased by 31%. By what percent should a family reduce the consumption of cooking oil so as not to increase the expenditure in this account?

- Ans ☐ 1. 22.55%
☒ 2. 23.66%
☐ 3. 20.56%
☐ 4. 19.67%

Question ID : 630680603970
Option 1 ID : 6306802363338
Option 2 ID : 6306802363339
Option 3 ID : 6306802363337
Option 4 ID : 6306802363336

Q.20 How many numbers between 1000 and 3300 are exactly divisible by 125?

- Ans
- ☐ 1. 21
 - ☐ 2. 23
 - ☐ 3. 25
 - ☒ 4. 19

Question ID : 630680603967
Option 1 ID : 6306802363325
Option 2 ID : 6306802363326
Option 3 ID : 6306802363327
Option 4 ID : 6306802363324

Section : Arithmetical and Numerical Ability 2

Q.1 What is the third proportional to $\frac{1}{8}$ and $\frac{1}{12}$?

- Ans
- ☐ 1. $\frac{1}{5}$
 - ☐ 2. $\frac{1}{9}$
 - ☐ 3. $\frac{1}{4}$
 - ☒ 4. $\frac{1}{18}$

Question ID : 630680603737
Option 1 ID : 6306802362406
Option 2 ID : 6306802362405
Option 3 ID : 6306802362404
Option 4 ID : 6306802362407

Q.2 Find the sale price of a shirt whose marked price is ₹ 546 after deducting a discount of 15% on its marked price.

- Ans
- ☐ 1. ₹ 422.55
 - ☐ 2. ₹ 420.20
 - ☒ 3. ₹ 464.10
 - ☐ 4. ₹ 490.20

Question ID : 630680603735
Option 1 ID : 6306802362397
Option 2 ID : 6306802362396
Option 3 ID : 6306802362398
Option 4 ID : 6306802362399

Q.3 Rohan is travelling on his cycle and has calculated to reach point A at 2 P.M , if he travels at 12 kmph. he will reach there at 12 noon, if he travels at 18 kmph. At what speed must he travel to reach A at 1 P.M.?

- Ans
- ☒ 1. 14.4 kmph
 - ☐ 2. 10.5 kmph
 - ☐ 3. 12 kmph
 - ☐ 4. 15.8 kmph

Question ID : 630680619904
Option 1 ID : 6306802425699
Option 2 ID : 6306802425697
Option 3 ID : 6306802425698
Option 4 ID : 6306802425700

Q.4 A mixture contains sugar solution and colored water in the ratio of 5 : 2. If 10 liters of colored water is added to the mixture, the ratio becomes 5: 4. Find the initial quantity of sugar solution in the given mixture.

- Ans**
- ☐ 1. 20 liters
 - ☒ 2. 25 liters
 - ☐ 3. 16 liters
 - ☐ 4. 19 liters

Question ID : 630680619907
Option 1 ID : 6306802425711
Option 2 ID : 6306802425710
Option 3 ID : 6306802425709
Option 4 ID : 6306802425712

Q.5 A horse is tethered to one corner of a rectangular grassy field 68 m by 38 m with a rope 28 m long. Over how much area of the field can it graze?

- Ans**
- ☐ 1. 522 m²
 - ☐ 2. 475 m²
 - ☒ 3. 616 m²
 - ☐ 4. 578 m²

Question ID : 630680603947
Option 1 ID : 6306802363245
Option 2 ID : 6306802363244
Option 3 ID : 6306802363247
Option 4 ID : 6306802363246

Q.6 Two numbers are in the ratio 3:5. If 4 is added to each, the ratio becomes 6:7. Find the numbers.

- Ans**
- ☒ 1. 4/3, 20/9
 - ☐ 2. 2/5, 15/8
 - ☐ 3. 6/7, 11/8
 - ☐ 4. 5/3, 12/9

Question ID : 630680619906
Option 1 ID : 6306802425707
Option 2 ID : 6306802425708
Option 3 ID : 6306802425706
Option 4 ID : 6306802425705

Q.7 A man riding his bicycle covers 115 meters in 23 seconds. What is his speed in km per hour?

- Ans**
- ☐ 1. 15 kmph
 - ☒ 2. 18 kmph
 - ☐ 3. 20 kmph
 - ☐ 4. 21 kmph

Question ID : 630680619925
Option 1 ID : 6306802425784
Option 2 ID : 6306802425783
Option 3 ID : 6306802425782
Option 4 ID : 6306802425781

Q.8 The length, breadth, and height of the cuboidal room are 10 m, 12 m, and 14 m respectively. What is the cost of whitewashing the four walls of the room if the cost of whitewashing is ₹8 per m^2 ?

- Ans**
- ☒ 1. ₹ 5500
 - ☒ 2. ₹ 6530
 - ☒ 3. ₹ 6234
 - ☒ 4. ₹ 4928

Question ID : 630680603831
Option 1 ID : 6306802362783
Option 2 ID : 6306802362782
Option 3 ID : 6306802362781
Option 4 ID : 6306802362780

Q.9 In a library, the ratio of number of story books to that of non-story books was 5:7 and total number of story books was 1325. When some more story books were bought, the ratio became 8:5. Find the number of story books bought.

- Ans**
- ☒ 1. 1934
 - ☒ 2. 2145
 - ☒ 3. 1643
 - ☒ 4. 1789

Question ID : 630680619923
Option 1 ID : 6306802425774
Option 2 ID : 6306802425773
Option 3 ID : 6306802425776
Option 4 ID : 6306802425775

Q.10 The ratio between the speeds of two trains is 5 : 7. If the second train runs 147 km in 3 hours, then the speed of the first train is:

- Ans**
- ☒ 1. 35 km/hr.
 - ☒ 2. 38 km/hr.
 - ☒ 3. 30 km/hr.
 - ☒ 4. 49 km/hr.

Question ID : 630680603785
Option 1 ID : 6306802362597
Option 2 ID : 6306802362598
Option 3 ID : 6306802362596
Option 4 ID : 6306802362599

Q.11 Two successive discounts of 35% and 20%, respectively, on the marked price of an article are equal to single discount of ₹1620. The marked price (in Rs) of the article is.

- Ans**
- ☒ 1. ₹ 3375
 - ☒ 2. ₹ 3070
 - ☒ 3. ₹ 2850
 - ☒ 4. ₹ 2265

Question ID : 630680603935
Option 1 ID : 6306802363197
Option 2 ID : 6306802363199
Option 3 ID : 6306802363196
Option 4 ID : 6306802363198

Q.12 A wire is bent to form a square of side 24 cm. If the wire is rebent to form a circle, then its radius will be.

- Ans
- ☐ 1. 26 cm
 - ☐ 2. 19.20 cm
 - ☒ 3. 15.27 cm
 - ☐ 4. 12 cm

Question ID : 630680603989
Option 1 ID : 6306802363412
Option 2 ID : 6306802363413
Option 3 ID : 6306802363414
Option 4 ID : 6306802363415

Q.13 5 person can stay in cubical room each person requires 25 m^3 of air. The side of the cube is:

- Ans
- ☒ 1. 5 m.
 - ☐ 2. 12.5 m.
 - ☐ 3. 15 m.
 - ☐ 4. 3.5 m.

Question ID : 630680603750
Option 1 ID : 6306802362458
Option 2 ID : 6306802362456
Option 3 ID : 6306802362457
Option 4 ID : 6306802362459

Q.14 Find the number of balls of diameter 6 cm each, that can be made from recasting a sphere of diameter 48 cm.

- Ans
- ☐ 1. 315
 - ☐ 2. 505
 - ☐ 3. 420
 - ☒ 4. 512

Question ID : 630680619917
Option 1 ID : 6306802425750
Option 2 ID : 6306802425749
Option 3 ID : 6306802425751
Option 4 ID : 6306802425752

Q.15 Two men start together to walk a certain distance, one at 6 km/h and another at 3 km/h. The former arrives half an hour before the latter. Find the distance.

- Ans
- ☒ 1. 3 km
 - ☐ 2. 5.5 km
 - ☐ 3. 4 km
 - ☐ 4. 6 km

Question ID : 630680603944
Option 1 ID : 6306802363234
Option 2 ID : 6306802363233
Option 3 ID : 6306802363235
Option 4 ID : 6306802363232

Q.16 A tier has two punctures. The first punctures alone would have made the tier flat in 14 minutes and the second alone would have done it in 22 minutes. if air leaks out at a constant rate, how long does it take both the punctures together to make it flat?

- Ans**
- ☒ 1. 9 minutes
 - ☒ 2. 8.56 minutes
 - ☒ 3. 10.25 minutes
 - ☒ 4. 11 minutes

Question ID : 630680603781
Option 1 ID : 6306802362581
Option 2 ID : 6306802362580
Option 3 ID : 6306802362582
Option 4 ID : 6306802362583

Q.17 A merchant has 100 kg sugar, part of which sells at 10% profit and the rest at 25% profit. He gain 19.9% on the whole. The quantity sold at 10% profit is :

- Ans**
- ☒ 1. 27 kg
 - ☒ 2. 48.5 kg
 - ☒ 3. 34 kg
 - ☒ 4. 38.5 kg

Question ID : 630680603733
Option 1 ID : 6306802362388
Option 2 ID : 6306802362391
Option 3 ID : 6306802362389
Option 4 ID : 6306802362390

Q.18 Two successive discounts of 24% and 34%, respectively, on the marked price of an article are equal to single discount of ₹1246. The marked price (in Rs) of the article is:

- Ans**
- ☒ 1. ₹ 1500
 - ☒ 2. ₹ 2800
 - ☒ 3. ₹ 2500
 - ☒ 4. ₹ 1800

Question ID : 630680603856
Option 1 ID : 6306802362880
Option 2 ID : 6306802362883
Option 3 ID : 6306802362882
Option 4 ID : 6306802362881

Q.19 Glass in the form of a right circular cylinder is half full of water. Its base radius is 5 cm and height is 12 cm. The volume of water is.

- Ans**
- ☒ 1. $168 \pi \text{ cm}^3$
 - ☒ 2. $180 \pi \text{ cm}^3$
 - ☒ 3. $150 \pi \text{ cm}^3$
 - ☒ 4. $210 \pi \text{ cm}^3$

Question ID : 630680603912
Option 1 ID : 6306802363105
Option 2 ID : 6306802363106
Option 3 ID : 6306802363104
Option 4 ID : 6306802363107

Q.20 A and B can do a piece of work in 6 days. B and C can do it in 12 days. A and C can do it in 10 days. How long will A take to do it alone (approx.)?

- Ans**
- ✓ 1. 11 days
 - ✗ 2. 9 days
 - ✗ 3. 16 days
 - ✗ 4. 12 days

Question ID : 630680603782
Option 1 ID : 6306802362586
Option 2 ID : 6306802362587
Option 3 ID : 6306802362584
Option 4 ID : 6306802362585

Section : Test of English Language and Comprehension 1

Q.1 Choose the most appropriate one-word substitution for the below word.
"A person who is skilled in horsemanship"

- Ans**
- ✗ 1. Secretary
 - ✓ 2. Equestrian
 - ✗ 3. Pedestrian
 - ✗ 4. Lawyer

Question ID : 630680620402
Option 1 ID : 6306802427686
Option 2 ID : 6306802427687
Option 3 ID : 6306802427685
Option 4 ID : 6306802427688

Q.2 Choose the answer below that spells the word in bold correctly.
I can't dance to music without a good **rhithym**.

- Ans**
- ✗ 1. reythm
 - ✗ 2. rhythmm
 - ✓ 3. rhythm
 - ✗ 4. rhythem

Question ID : 630680620155
Option 1 ID : 6306802426745
Option 2 ID : 6306802426747
Option 3 ID : 6306802426746
Option 4 ID : 6306802426748

Q.3 Choose the most appropriate one-word substitution for the below word.
"One who offers his services without charging for it"

- Ans**
- ✗ 1. Philanthropist
 - ✗ 2. Felicitate
 - ✓ 3. Volunteer
 - ✗ 4. Transcriber

Question ID : 630680620235
Option 1 ID : 6306802427049
Option 2 ID : 6306802427050
Option 3 ID : 6306802427051
Option 4 ID : 6306802427052

Q.4 Choose the most logical order of the sentences from among the four given choices to construct a coherent paragraph.
Following the Commission for Air Quality Management (CAQM) orders, the Public Works Department (PWD) has issued a set of directions to engineers to control dust pollution at all the construction sites in the city.
A) Orders have been issued to install sensors at all the construction sites for monitoring particulate matter and pollution levels as well as monitor the sensor data every day.
B) "Engineers should check each factor responsible for causing dust pollution and suggest immediate remedial measures. The inputs collected within a period of seven days will be utilized to initiate remedial measures for mitigating dust emissions, as per CAQM guidelines," said an official.
C) Meanwhile, the engineers have been tasked to upload details of everyday inspection on the 'Delhi E-monitoring' Mobile App.
D) The executive engineers of all the Divisions have been directed to mandatorily visit their worksites for effective monitoring of dust emissions.

Ans ☒ 1. DACB

☐ 2. DBCA

☐ 3. CADB

☐ 4. ABCD

Question ID : 630680620190

Option 1 ID : 6306802426878

Option 2 ID : 6306802426880

Option 3 ID : 6306802426879

Option 4 ID : 6306802426877

Q.5 Choose the most appropriate one-word substitution for the below word.
"A person who is bad in spelling"

Ans ☐ 1. Linguist

☐ 2. Pedant

☐ 3. Unilateral

☒ 4. Cacographer

Question ID : 630680620237

Option 1 ID : 6306802427058

Option 2 ID : 6306802427060

Option 3 ID : 6306802427059

Option 4 ID : 6306802427057

Q.6 Choose the most appropriate one-word substitution for the below word.
"Study of hereditary, genes and variation in living organisms"

Ans ☐ 1. Physiology

☐ 2. Zoology

☒ 3. Genetics

☐ 4. Forensics

Question ID : 630680620404

Option 1 ID : 6306802427695

Option 2 ID : 6306802427694

Option 3 ID : 6306802427693

Option 4 ID : 6306802427696

Q.7 Select the most appropriate meaning of the proverb below from the given options.
"Haste makes waste"

- Ans
- ☒ 1. A child has similar characteristics to their parents
 - ☒ 2. Do not delay a task if you can do it immediately
 - ☒ 3. Doing something too quickly results in mistakes
 - ☒ 4. When you really need something, you find a way to meet the need

Question ID : 630680620200
Option 1 ID : 6306802426920
Option 2 ID : 6306802426918
Option 3 ID : 6306802426917
Option 4 ID : 6306802426919

Q.8 Select the appropriate article from the below options to complete the sentence.
Mark "No article" if there is no requirement of article in the given sentence.
I would like to eat _____apple pie.

- Ans
- ☒ 1. a
 - ☒ 2. No article
 - ☒ 3. the
 - ☒ 4. an

Question ID : 630680620356
Option 1 ID : 6306802427511
Option 2 ID : 6306802427510
Option 3 ID : 6306802427512
Option 4 ID : 6306802427509

Q.9 Read the below statement and fill in the gaps using correct positive question tags.
I wasn't rude, _____?

- Ans
- ☒ 1. could I
 - ☒ 2. should I
 - ☒ 3. was I
 - ☒ 4. wouldn't I

Question ID : 630680620308
Option 1 ID : 6306802427326
Option 2 ID : 6306802427325
Option 3 ID : 6306802427328
Option 4 ID : 6306802427327

Q.10 Choose the answer below that spells the word in bold correctly.
Some elderly people suffer from iron **deficiency** in their diet.

- Ans
- ☒ 1. defecency
 - ☒ 2. deficiency
 - ☒ 3. defficiency
 - ☒ 4. deficienci

Question ID : 630680620408
Option 1 ID : 6306802427709
Option 2 ID : 6306802427711
Option 3 ID : 6306802427712
Option 4 ID : 6306802427710

Q.11 Select the appropriate article from the below options to complete the sentence.
Mark "No article" if there is no requirement of article in the given sentence.
I will ask _____ friend of mine to accompany me to my uncle's wedding.

- Ans
- ☒ 1. the
 - ☒ 2. No article
 - ☒ 3. a
 - ☒ 4. an

Question ID : 630680620230
Option 1 ID : 6306802427031
Option 2 ID : 6306802427030
Option 3 ID : 6306802427029
Option 4 ID : 6306802427032

Q.12 Read the below statement and fill in the gaps using correct positive question tags.
Your mother hadn't met him before, _____?

- Ans
- ☒ 1. she had
 - ☒ 2. can she
 - ☒ 3. had she
 - ☒ 4. she can

Question ID : 630680620266
Option 1 ID : 6306802427166
Option 2 ID : 6306802427167
Option 3 ID : 6306802427168
Option 4 ID : 6306802427165

Q.13 Select the most appropriate preposition from the given option to fill in the blanks for the given sentence.
Harish and Tarla always go out _____ a meal on their wedding anniversary.

- Ans
- ☒ 1. on
 - ☒ 2. for
 - ☒ 3. with
 - ☒ 4. by

Question ID : 630680620184
Option 1 ID : 6306802426856
Option 2 ID : 6306802426855
Option 3 ID : 6306802426854
Option 4 ID : 6306802426853

Q.14 Choose the most logical order of the sentences from among the four given choices to construct a coherent paragraph.
Human beings experience a range of consciousness throughout their daily lives.
A) Lack of awareness is known as unconsciousness, while being conscious but not fully present is referred to as daydreaming.
B) Consciousness, the awareness of the world around us, is not always constant and can vary in intensity.
C) Understanding the different states of consciousness is essential in assessing an individual's issues and finding solutions.
D) The state of low awareness is characterized by the inability to perceive every aspect of the surrounding world in detail, but the brain is still capable of receiving and processing signals.

- Ans
- ☒ 1. BCDA
 - ☒ 2. ABCD
 - ☒ 3. BACD
 - ☒ 4. CADB

Question ID : 630680620149
Option 1 ID : 6306802426722
Option 2 ID : 6306802426724
Option 3 ID : 6306802426723
Option 4 ID : 6306802426721

Q.15 Choose the answer below that spells the word in bold correctly.
We can curb **juvenile** delinquency by education.

- Ans
- ☒ 1. juvenil
 - ☒ 2. juvenile
 - ☒ 3. juevenile
 - ☒ 4. juviinile

Question ID : 630680620238
Option 1 ID : 6306802427061
Option 2 ID : 6306802427062
Option 3 ID : 6306802427064
Option 4 ID : 6306802427063

Q.16 Select the most appropriate preposition from the given option to fill in the blanks for the given sentence.
Disha compared her performance_____ other participants.

- Ans
- ☒ 1. With
 - ☒ 2. Between
 - ☒ 3. while
 - ☒ 4. Among

Question ID : 630680620351
Option 1 ID : 6306802427490
Option 2 ID : 6306802427491
Option 3 ID : 6306802427492
Option 4 ID : 6306802427489

Q.17 Select the most appropriate preposition from the given option to fill in the blanks for the given sentence.
We saw wounded tiger while passing _____the forest.

- Ans
- ☒ 1. among
 - ☒ 2. of
 - ☒ 3. through
 - ☒ 4. from

Question ID : 630680620269
Option 1 ID : 6306802427177
Option 2 ID : 6306802427180
Option 3 ID : 6306802427179
Option 4 ID : 6306802427178

Q.18 Read the below statement and fill in the gaps using correct positive question tags.
None of the printers are working, _____?

- Ans
- ☒ 1. shouldn't they
 - ☒ 2. mustn't they
 - ☒ 3. are they
 - ☒ 4. aren't they

Question ID : 630680620349
Option 1 ID : 6306802427484
Option 2 ID : 6306802427483
Option 3 ID : 6306802427482
Option 4 ID : 6306802427481

Q.19 Select the appropriate article from the below options to complete the sentence.
Mark "No article" if there is no requirement of article in the given sentence.
The measles is _____contagious disease.

- Ans
- ☒ 1. the
 - ☒ 2. No article
 - ☒ 3. a
 - ☒ 4. an

Question ID : 630680620188
Option 1 ID : 6306802426872
Option 2 ID : 6306802426870
Option 3 ID : 6306802426869
Option 4 ID : 6306802426871

Q.20 Select the most appropriate preposition from the given option to fill in the blanks for the given sentence.
The burglars got _____the house by breaking a window.

- Ans
- ☒ 1. while
 - ☒ 2. upto
 - ☒ 3. into
 - ☒ 4. between

Question ID : 630680620354
Option 1 ID : 6306802427503
Option 2 ID : 6306802427504
Option 3 ID : 6306802427502
Option 4 ID : 6306802427501

Q.1 Select the most appropriate meaning of the proverb below from the given options.
"A fool and his money are soon parted"

- Ans
- ☒ 1. Explaining something is easier through a picture than by words
 - ☒ 2. Being overly frugal with small expenses can lead to greater, more costly problems
 - ☒ 3. People who are not careful with their finances will quickly lose their wealth
 - ☒ 4. Something might not be as valuable as it seems to be

Question ID : 630680620242
Option 1 ID : 6306802427077
Option 2 ID : 6306802427079
Option 3 ID : 6306802427078
Option 4 ID : 6306802427080

Q.2 In the following question out of the four alternatives, choose the one which best expresses the meaning of the given word as your answer.
Repressive

- Ans
- ☒ 1. Expressive
 - ☒ 2. Unimpressive
 - ☒ 3. Poignant
 - ☒ 4. Emotional

Question ID : 630680620291
Option 1 ID : 6306802427268
Option 2 ID : 6306802427265
Option 3 ID : 6306802427267
Option 4 ID : 6306802427266

Q.3 In the following question out of the four alternatives, choose the one which best expresses the meaning of the given word as your answer.
Mediocre

- Ans
- ☒ 1. satisfactory
 - ☒ 2. intelligent
 - ☒ 3. poor
 - ☒ 4. brilliant

Question ID : 630680620166
Option 1 ID : 6306802426790
Option 2 ID : 6306802426792
Option 3 ID : 6306802426791
Option 4 ID : 6306802426789

Q.4 Select the most appropriate meaning of the proverb below from the given options.
"A smooth sea never made a skilled sailor"

- Ans
- ☒ 1. Time seems to pass more slowly when you're eagerly waiting for something
 - ☒ 2. Challenges and hardships are opportunities for personal growth
 - ☒ 3. People who are not careful with their finances will quickly lose their wealth
 - ☒ 4. Once something is done, it's irreversible

Question ID : 630680620288
Option 1 ID : 6306802427256
Option 2 ID : 6306802427254
Option 3 ID : 6306802427255
Option 4 ID : 6306802427253

Q.5 Select the most appropriate meaning of the proverb below from the given options.
"An idle brain is the devil's workshop"

- Ans
- ☒ 1. It is better to deal with problems immediately than letting them become bigger
 - ☒ 2. Something might be different from how they appear outwardly
 - ☒ 3. It is better to take precautions than to regret later
 - ☒ 4. Evil thoughts come to us easily when we are idle

Question ID : 630680620245
Option 1 ID : 6306802427089
Option 2 ID : 6306802427090
Option 3 ID : 6306802427092
Option 4 ID : 6306802427091

Q.6 Select the most appropriate meaning of the proverb below from the given options.
A stitch in time saves nine

- Ans
- ☒ 1. Don't make plans based on events that have not yet happened
 - ☒ 2. It is better to deal with problems immediately than letting them become bigger
 - ☒ 3. The perception of beauty varies from person to person
 - ☒ 4. Follow the local customs when you visit a foreign place

Question ID : 630680620159
Option 1 ID : 6306802426764
Option 2 ID : 6306802426762
Option 3 ID : 6306802426761
Option 4 ID : 6306802426763

Q.7 In the following question out of the four alternatives, choose the one which best expresses the meaning of the given word as your answer.
Pragmatic

- Ans
- ☒ 1. Realistic
 - ☒ 2. Fanciful
 - ☒ 3. Utopian
 - ☒ 4. Imaginative

Question ID : 630680620418
Option 1 ID : 6306802427750
Option 2 ID : 6306802427751
Option 3 ID : 6306802427749
Option 4 ID : 6306802427752

Q.8 In the following question out of the four alternatives, choose the one which best expresses the meaning of the given word as your answer.
Verdict

- Ans
- ☒ 1. Deadlock
 - ☒ 2. Pause
 - ☒ 3. Halt
 - ☒ 4. Decision

Question ID : 630680620247
Option 1 ID : 6306802427100
Option 2 ID : 6306802427099
Option 3 ID : 6306802427097
Option 4 ID : 6306802427098

Q.9 In the following question out of the four alternatives, choose the one which best expresses the meaning of the given word as your answer.

Incursions

Ans ☒ 1. Invasions

☐ 2. Planned

☐ 3. Deliberate

☐ 4. Intended

Question ID : 630680620251

Option 1 ID : 6306802427113

Option 2 ID : 6306802427114

Option 3 ID : 6306802427116

Option 4 ID : 6306802427115

Q.10 Select the most appropriate meaning of the proverb below from the given options.
"Don't count your chickens before they hatch"

Ans ☐ 1. There is always a positive side to any difficult situation

☒ 2. Don't make plans based on events that have not yet happened

☐ 3. Don't form an opinion about someone by their appearance

☐ 4. Don't risk everything on a single venture

Question ID : 630680620285

Option 1 ID : 6306802427244

Option 2 ID : 6306802427241

Option 3 ID : 6306802427242

Option 4 ID : 6306802427243

Comprehension:

Refer to the below passage.

Symbols can be an effective way of communicating ideas and messages. They allow us to convey complex concepts and emotions in a simple and easy-to-understand way.

Symbolism can be found in many different forms of communication, from art and literature to advertising and branding.

One example of symbolism is the use of colors. Different colors can have different meanings and associations. For example, red can represent passion, love, and danger, while blue can represent calmness, trust, and stability. This is why many companies use specific colors in their branding to evoke certain emotions and associations in their customers. Another example of symbolism is the use of images and metaphors. These can be used to communicate complex ideas in a simple and easy-to-understand way. For example, a heart can be used to represent love, a dove can represent peace, and a broken chain can represent freedom.

Symbolism can also be used to communicate cultural and historical meanings. For example, the American flag is a symbol of the United States and represents its history, values, and culture. Similarly, the Chinese dragon is a symbol of power and strength in Chinese culture. The power of symbolism lies in its ability to evoke emotions, convey ideas, and communicate messages in a way that is easily understood. Symbols can be used to create a sense of identity and community, as well as to bridge cultural and linguistic barriers. Whether in art, literature, or everyday communication, symbols are a powerful tool for effective communication.

SubQuestion No : 11

Q.11 Identify the suitable title for the passage.

Ans ☐ 1. Art and literature

☒ 2. The power of symbolism in communication

☐ 3. Cultural and linguistic barriers

☐ 4. Colors and their similar meanings

Question ID : 630680620259

Option 1 ID : 6306802427137

Option 2 ID : 6306802427138

Option 3 ID : 6306802427139

Option 4 ID : 6306802427140

Comprehension:

Refer to the below passage.

Symbols can be an effective way of communicating ideas and messages. They allow us to convey complex concepts and emotions in a simple and easy-to-understand way.

Symbolism can be found in many different forms of communication, from art and literature to advertising and branding.

One example of symbolism is the use of colors. Different colors can have different meanings and associations. For example, red can represent passion, love, and danger, while blue can represent calmness, trust, and stability. This is why many companies use specific colors in their branding to evoke certain emotions and associations in their customers. Another example of symbolism is the use of images and metaphors. These can be used to communicate complex ideas in a simple and easy-to-understand way. For example, a heart can be used to represent love, a dove can represent peace, and a broken chain can represent freedom.

Symbolism can also be used to communicate cultural and historical meanings. For example, the American flag is a symbol of the United States and represents its history, values, and culture. Similarly, the Chinese dragon is a symbol of power and strength in Chinese culture. The power of symbolism lies in its ability to evoke emotions, convey ideas, and communicate messages in a way that is easily understood. Symbols can be used to create a sense of identity and community, as well as to bridge cultural and linguistic barriers. Whether in art, literature, or everyday communication, symbols are a powerful tool for effective communication.

SubQuestion No : 12

Q.12 Select the most appropriate **SYNONYM** of the given word below.
Complex

- Ans
- ☒ 1. Unfancy
 - ☒ 2. Simple
 - ☒ 3. Modest
 - ☒ 4. Intricate

Question ID : 630680620262
Option 1 ID : 6306802427152
Option 2 ID : 6306802427149
Option 3 ID : 6306802427150
Option 4 ID : 6306802427151



Comprehension:

Refer to the below passage.

Symbols can be an effective way of communicating ideas and messages. They allow us to convey complex concepts and emotions in a simple and easy-to-understand way.

Symbolism can be found in many different forms of communication, from art and literature to advertising and branding.

One example of symbolism is the use of colors. Different colors can have different meanings and associations. For example, red can represent passion, love, and danger, while blue can represent calmness, trust, and stability. This is why many companies use specific colors in their branding to evoke certain emotions and associations in their customers. Another example of symbolism is the use of images and metaphors. These can be used to communicate complex ideas in a simple and easy-to-understand way. For example, a heart can be used to represent love, a dove can represent peace, and a broken chain can represent freedom.

Symbolism can also be used to communicate cultural and historical meanings. For example, the American flag is a symbol of the United States and represents its history, values, and culture. Similarly, the Chinese dragon is a symbol of power and strength in Chinese culture. The power of symbolism lies in its ability to evoke emotions, convey ideas, and communicate messages in a way that is easily understood. Symbols can be used to create a sense of identity and community, as well as to bridge cultural and linguistic barriers. Whether in art, literature, or everyday communication, symbols are a powerful tool for effective communication.

SubQuestion No : 13

Q.13 Given below is a word, followed by three sentences that consist of that word. From the given options identify the sentence(s) that best express(es) the meaning of the word.

Convey

A) He tried desperately to convey how urgent the situation was.

B) It is difficult to convey the sheer complexity of the situation.

C) The Nobel prize has become the ultimate convey in the sciences.

Ans  1. A & B only

 2. A & C only

 3. A, B & C only

 4. B & C only

Question ID : 630680620261

Option 1 ID : 6306802427146

Option 2 ID : 6306802427148

Option 3 ID : 6306802427145

Option 4 ID : 6306802427147



Comprehension:

Refer to the below passage.

Symbols can be an effective way of communicating ideas and messages. They allow us to convey complex concepts and emotions in a simple and easy-to-understand way.

Symbolism can be found in many different forms of communication, from art and literature to advertising and branding.

One example of symbolism is the use of colors. Different colors can have different meanings and associations. For example, red can represent passion, love, and danger, while blue can represent calmness, trust, and stability. This is why many companies use specific colors in their branding to evoke certain emotions and associations in their customers. Another example of symbolism is the use of images and metaphors. These can be used to communicate complex ideas in a simple and easy-to-understand way. For example, a heart can be used to represent love, a dove can represent peace, and a broken chain can represent freedom.

Symbolism can also be used to communicate cultural and historical meanings. For example, the American flag is a symbol of the United States and represents its history, values, and culture. Similarly, the Chinese dragon is a symbol of power and strength in Chinese culture. The power of symbolism lies in its ability to evoke emotions, convey ideas, and communicate messages in a way that is easily understood. Symbols can be used to create a sense of identity and community, as well as to bridge cultural and linguistic barriers. Whether in art, literature, or everyday communication, symbols are a powerful tool for effective communication.

SubQuestion No : 14

Q.14 Select the most appropriate **SYNONYM** of the given word below.
Stability

- Ans
- ☐ 1. variability
 - ☐ 2. weakness
 - ☐ 3. insecurity
 - ☒ 4. Strength

Question ID : 630680620263
Option 1 ID : 6306802427156
Option 2 ID : 6306802427155
Option 3 ID : 6306802427154
Option 4 ID : 6306802427153



Comprehension:

Refer to the below passage.

Symbols can be an effective way of communicating ideas and messages. They allow us to convey complex concepts and emotions in a simple and easy-to-understand way.

Symbolism can be found in many different forms of communication, from art and literature to advertising and branding.

One example of symbolism is the use of colors. Different colors can have different meanings and associations. For example, red can represent passion, love, and danger, while blue can represent calmness, trust, and stability. This is why many companies use specific colors in their branding to evoke certain emotions and associations in their customers. Another example of symbolism is the use of images and metaphors. These can be used to communicate complex ideas in a simple and easy-to-understand way. For example, a heart can be used to represent love, a dove can represent peace, and a broken chain can represent freedom.

Symbolism can also be used to communicate cultural and historical meanings. For example, the American flag is a symbol of the United States and represents its history, values, and culture. Similarly, the Chinese dragon is a symbol of power and strength in Chinese culture. The power of symbolism lies in its ability to evoke emotions, convey ideas, and communicate messages in a way that is easily understood. Symbols can be used to create a sense of identity and community, as well as to bridge cultural and linguistic barriers. Whether in art, literature, or everyday communication, symbols are a powerful tool for effective communication.

SubQuestion No : 15

Q.15 Given below is a word, followed by three sentences that consist of that word. From the given options identify the sentence(s) that best express(es) the meaning of the word.

Evoke

A) Smells and tastes often evoke memories from the past.

B) Cellular phones, too, often evoke a confused state of dread.

C) It was absurd to imagine that a modern city could still evoke that kind of magic!

Ans

☒ 1. B only

☒ 2. C only

☒ 3. A, B and C only

☒ 4. A only

Question ID : 630680620260

Option 1 ID : 6306802427142

Option 2 ID : 6306802427144

Option 3 ID : 6306802427143

Option 4 ID : 6306802427141



Comprehension:

Refer to the below passage and answer the questions.

Secret agents have been a part of history since ancient times. The term "secret agent" is synonymous with "spy," and it brings to mind images of mystery, intrigue, and glamour. However, the reality of being a secret agent is quite different from what is depicted in movies and books. Secret agents are people who gather confidential information about a person, organization, or country for their employers. They operate stealthily and must keep their identities and intentions hidden. Governments, companies, and individuals have long recognized that the information obtained by secret agents gives them an edge over their rivals. During the Cold War, the United States and Russia competed fiercely for military and political supremacy, and both employed extensive intelligence networks. Secret agents are also used by dictatorial and communist regimes to keep an eye on citizens who voice out their opinions.

The public perception of spying for one's country is that it is honorable. However, during wartime, secret agents who were caught by hostile countries were often executed. Advances in technology have enabled information to be obtained more easily. Secret agents need to be intelligent, brave, resourceful, and discreet, but they have a plethora of aids and methods to help them. Miniature cameras, telephone bugs, spy planes, satellites, surveillance cameras, and effective disguise aids are just a few examples.

The movie industry has glamorized the secret agent as an attractive figure. James Bond is a well-known example of a British hero who is always one step ahead of his enemies. However, secret agents can also be betrayed by their enemies who pose as friends. Spy films and books are popular, and even children enjoy the lighthearted take on spying in movies like "Spykids." Spy shops selling spy gear are also popular.

SubQuestion No : 16

Q.16 Given below is a word, followed by three sentences that consist of that word. From the given options identify the sentence(s) that best express(es) the meaning of the word.

Surveillance

A) The suspects are under police surveillance.

B) The country's borders are kept under constant surveillance.

C) The company is planning to place surveillance equipment at both ends of the tunnel.

Ans  1. A, B and C only

 2. B only

 3. B & C only

 4. A & C only

Question ID : 630680620176
Option 1 ID : 6306802426822
Option 2 ID : 6306802426824
Option 3 ID : 6306802426823
Option 4 ID : 6306802426821



Comprehension:

Refer to the below passage and answer the questions.

Secret agents have been a part of history since ancient times. The term "secret agent" is synonymous with "spy," and it brings to mind images of mystery, intrigue, and glamour. However, the reality of being a secret agent is quite different from what is depicted in movies and books. Secret agents are people who gather confidential information about a person, organization, or country for their employers. They operate stealthily and must keep their identities and intentions hidden. Governments, companies, and individuals have long recognized that the information obtained by secret agents gives them an edge over their rivals. During the Cold War, the United States and Russia competed fiercely for military and political supremacy, and both employed extensive intelligence networks. Secret agents are also used by dictatorial and communist regimes to keep an eye on citizens who voice out their opinions.

The public perception of spying for one's country is that it is honorable. However, during wartime, secret agents who were caught by hostile countries were often executed. Advances in technology have enabled information to be obtained more easily. Secret agents need to be intelligent, brave, resourceful, and discreet, but they have a plethora of aids and methods to help them. Miniature cameras, telephone bugs, spy planes, satellites, surveillance cameras, and effective disguise aids are just a few examples.

The movie industry has glamorized the secret agent as an attractive figure. James Bond is a well-known example of a British hero who is always one step ahead of his enemies.

However, secret agents can also be betrayed by their enemies who pose as friends. Spy films and books are popular, and even children enjoy the lighthearted take on spying in movies like "Spykids." Spy shops selling spy gear are also popular.

SubQuestion No : 17

Q.17 Select the most appropriate **SYNONYM** of the given word below.
Fiercely

- Ans
- ☒ 1. Barely
 - ☒ 2. Little
 - ☒ 3. Marginally
 - ☒ 4. Terribly

Question ID : **630680620179**
Option 1 ID : **6306802426834**
Option 2 ID : **6306802426836**
Option 3 ID : **6306802426835**
Option 4 ID : **6306802426833**



Comprehension:

Refer to the below passage and answer the questions.

Secret agents have been a part of history since ancient times. The term "secret agent" is synonymous with "spy," and it brings to mind images of mystery, intrigue, and glamour. However, the reality of being a secret agent is quite different from what is depicted in movies and books. Secret agents are people who gather confidential information about a person, organization, or country for their employers. They operate stealthily and must keep their identities and intentions hidden. Governments, companies, and individuals have long recognized that the information obtained by secret agents gives them an edge over their rivals. During the Cold War, the United States and Russia competed fiercely for military and political supremacy, and both employed extensive intelligence networks. Secret agents are also used by dictatorial and communist regimes to keep an eye on citizens who voice out their opinions.

The public perception of spying for one's country is that it is honorable. However, during wartime, secret agents who were caught by hostile countries were often executed. Advances in technology have enabled information to be obtained more easily. Secret agents need to be intelligent, brave, resourceful, and discreet, but they have a plethora of aids and methods to help them. Miniature cameras, telephone bugs, spy planes, satellites, surveillance cameras, and effective disguise aids are just a few examples.

The movie industry has glamorized the secret agent as an attractive figure. James Bond is a well-known example of a British hero who is always one step ahead of his enemies. However, secret agents can also be betrayed by their enemies who pose as friends. Spy films and books are popular, and even children enjoy the lighthearted take on spying in movies like "Spykids." Spy shops selling spy gear are also popular.

SubQuestion No : 18

Q.18 Select the most appropriate **SYNONYM** of the given word below.
Plethora

- Ans
- ☐ 1. Deficiency
 - ☐ 2. Scarcity
 - ☐ 3. Inadequacy
 - ☒ 4. Abundance

Question ID : **630680620178**
Option 1 ID : **6306802426830**
Option 2 ID : **6306802426829**
Option 3 ID : **6306802426832**
Option 4 ID : **6306802426831**



Comprehension:

Refer to the below passage and answer the questions.

Secret agents have been a part of history since ancient times. The term "secret agent" is synonymous with "spy," and it brings to mind images of mystery, intrigue, and glamour. However, the reality of being a secret agent is quite different from what is depicted in movies and books. Secret agents are people who gather confidential information about a person, organization, or country for their employers. They operate stealthily and must keep their identities and intentions hidden. Governments, companies, and individuals have long recognized that the information obtained by secret agents gives them an edge over their rivals. During the Cold War, the United States and Russia competed fiercely for military and political supremacy, and both employed extensive intelligence networks. Secret agents are also used by dictatorial and communist regimes to keep an eye on citizens who voice out their opinions.

The public perception of spying for one's country is that it is honorable. However, during wartime, secret agents who were caught by hostile countries were often executed. Advances in technology have enabled information to be obtained more easily. Secret agents need to be intelligent, brave, resourceful, and discreet, but they have a plethora of aids and methods to help them. Miniature cameras, telephone bugs, spy planes, satellites, surveillance cameras, and effective disguise aids are just a few examples.

The movie industry has glamorized the secret agent as an attractive figure. James Bond is a well-known example of a British hero who is always one step ahead of his enemies. However, secret agents can also be betrayed by their enemies who pose as friends. Spy films and books are popular, and even children enjoy the lighthearted take on spying in movies like "Spykids." Spy shops selling spy gear are also popular.

SubQuestion No : 19

Q.19 Given below is a word, followed by three sentences that consist of that word. From the given options identify the sentence(s) that best express(es) the meaning of the word.

Disguise

- A) She usually goes out in disguise to avoid being bothered by the public.
- B) The traitor was at last disguise.
- C) She wore glasses and a wig as a disguise.

Ans ☒ 1. A, B and C only

☒ 2. A & C only

☒ 3. A & B only

☒ 4. B & C only

Question ID : 630680620177

Option 1 ID : 6306802426828

Option 2 ID : 6306802426826

Option 3 ID : 6306802426825

Option 4 ID : 6306802426827



Comprehension:

Refer to the below passage and answer the questions.

Secret agents have been a part of history since ancient times. The term "secret agent" is synonymous with "spy," and it brings to mind images of mystery, intrigue, and glamour. However, the reality of being a secret agent is quite different from what is depicted in movies and books. Secret agents are people who gather confidential information about a person, organization, or country for their employers. They operate stealthily and must keep their identities and intentions hidden. Governments, companies, and individuals have long recognized that the information obtained by secret agents gives them an edge over their rivals. During the Cold War, the United States and Russia competed fiercely for military and political supremacy, and both employed extensive intelligence networks. Secret agents are also used by dictatorial and communist regimes to keep an eye on citizens who voice out their opinions.

The public perception of spying for one's country is that it is honorable. However, during wartime, secret agents who were caught by hostile countries were often executed. Advances in technology have enabled information to be obtained more easily. Secret agents need to be intelligent, brave, resourceful, and discreet, but they have a plethora of aids and methods to help them. Miniature cameras, telephone bugs, spy planes, satellites, surveillance cameras, and effective disguise aids are just a few examples.

The movie industry has glamorized the secret agent as an attractive figure. James Bond is a well-known example of a British hero who is always one step ahead of his enemies. However, secret agents can also be betrayed by their enemies who pose as friends. Spy films and books are popular, and even children enjoy the lighthearted take on spying in movies like "Spykids." Spy shops selling spy gear are also popular.

SubQuestion No : 20

Q.20 Identify the suitable title for the passage.

- Ans ☒ 1. Perception of spy kids and their movies
- ☒ 2. The World of Secret Agents: Spies and Espionage
- ☒ 3. James Bond Movies and spy world
- ☒ 4. Spy shops

Question ID : 630680620175
Option 1 ID : 6306802426819
Option 2 ID : 6306802426817
Option 3 ID : 6306802426820
Option 4 ID : 6306802426818

Section : Test of Hindi Language and Comprehension 1

Q.1 निम्नलिखित वाक्यों में से कौन - सा वाक्य शुद्ध है?

- Ans ☒ 1. तालाब के अन्दर छोटा-सा मंदिर है।
- ☒ 2. देरी मत करना।
- ☒ 3. तुम्हारे सारे काम गलत होते हैं।
- ☒ 4. तारा निकल आया।

Question ID : 630680606174
Option 1 ID : 6306802371932
Option 2 ID : 6306802371931
Option 3 ID : 6306802371929
Option 4 ID : 6306802371930

Q.2 निम्नलिखित वाक्यों में से कौन - सा वाक्य शुद्ध है?

- Ans ☒ 1. शुद्ध गय की ची लाओ।
☒ 2. मुझे अब जाना है।
☒ 3. लड़का ने रोटी खाई।
☒ 4. राम पूरी खाई।

Question ID : 630680606169
Option 1 ID : 6306802371911
Option 2 ID : 6306802371910
Option 3 ID : 6306802371912
Option 4 ID : 6306802371909

Q.3 निम्नलिखित वाक्यों में से कौन - सा वाक्य शुद्ध है?

- Ans ☒ 1. पुलिस ने चोर को आरोप लगाया।
☒ 2. सात बैल को बेच दो।
☒ 3. भाई-बहन जा रहे हैं।
☒ 4. बिमारो को अलग खिलावो।

Question ID : 630680620088
Option 1 ID : 6306802426258
Option 2 ID : 6306802426257
Option 3 ID : 6306802426260
Option 4 ID : 6306802426259

Q.4 निम्न में से 'कनक' का अनेकार्थक शब्द क्या होगा?

- Ans ☒ 1. भाव
☒ 2. खजूर
☒ 3. इज्जत
☒ 4. मान

Question ID : 630680606115
Option 1 ID : 6306802371707
Option 2 ID : 6306802371705
Option 3 ID : 6306802371708
Option 4 ID : 6306802371706

Q.5 महाशय' का संधि विच्छेद क्या होगा?

- Ans ☒ 1. महः+ शय
☒ 2. महा+ आशय
☒ 3. महा+ शाय
☒ 4. मह+ आशय

Question ID : 630680605997
Option 1 ID : 6306802371269
Option 2 ID : 6306802371270
Option 3 ID : 6306802371272
Option 4 ID : 6306802371271

Q.6 निम्नलिखित में से 'अंगारों पर पैर रखना' मुहावरे का क्या तात्पर्य है?

- Ans
- ☒ 1. दुख सहना
 - ☒ 2. आग से खेलना
 - ☒ 3. जानबूझकर हानिकारक कार्य करना
 - ☒ 4. दूसरों को दुखी करना

Question ID : 630680620052
Option 1 ID : 6306802426126
Option 2 ID : 6306802426127
Option 3 ID : 6306802426125
Option 4 ID : 6306802426128

Q.7 निम्न में से 'सिंह' का पर्यायावाची शब्द क्या होगा?

- Ans
- ☒ 1. केसरी
 - ☒ 2. मरीची
 - ☒ 3. हेम
 - ☒ 4. उरग

Question ID : 630680606116
Option 1 ID : 6306802371709
Option 2 ID : 6306802371710
Option 3 ID : 6306802371712
Option 4 ID : 6306802371711

Q.8 "पेड़ से आम टपका।" इस वाक्य में कौन-सा कारक है ?

- Ans
- ☒ 1. अधिकरण कारक
 - ☒ 2. अपादान कारक
 - ☒ 3. संप्रदान कारक
 - ☒ 4. कर्म कारक

Question ID : 630680606177
Option 1 ID : 6306802371944
Option 2 ID : 6306802371943
Option 3 ID : 6306802371942
Option 4 ID : 6306802371941

Q.9 निम्न में से 'धवन' का संधि - विच्छेद बताये।

- Ans
- ☒ 1. धो + वन
 - ☒ 2. धह + वन
 - ☒ 3. धो + अन
 - ☒ 4. ध + वन

Question ID : 630680606216
Option 1 ID : 6306802372087
Option 2 ID : 6306802372085
Option 3 ID : 6306802372088
Option 4 ID : 6306802372086

Q.10 निम्नलिखित में से 'श्रीगणेश' का विलोम शब्द कौन-सा है?

- Ans
- ☒ 1. श्री राधा
 - ☒ 2. विनाश
 - ☒ 3. इतिश्री
 - ☒ 4. समापन

Question ID : 630680606206
Option 1 ID : 6306802372045
Option 2 ID : 6306802372046
Option 3 ID : 6306802372047
Option 4 ID : 6306802372048

Q.11 'बिल्ली दूध पीती है।' निम्न में से किस प्रकार का वाक्य है?

- Ans
- ☒ 1. संयुक्त वाक्य
 - ☒ 2. मिश्र वाक्य
 - ☒ 3. उपवाक्य
 - ☒ 4. सरल वाक्य

Question ID : 630680620075
Option 1 ID : 6306802426210
Option 2 ID : 6306802426209
Option 3 ID : 6306802426212
Option 4 ID : 6306802426211

Q.12 निम्न में से 'नाग' का अनेकार्थक शब्द क्या होगा?

- Ans
- ☒ 1. शिव
 - ☒ 2. सार
 - ☒ 3. नियम
 - ☒ 4. बादल

Question ID : 630680606243
Option 1 ID : 6306802372181
Option 2 ID : 6306802372184
Option 3 ID : 6306802372183
Option 4 ID : 6306802372182

Q.13 निम्नलिखित में से 'किला' का पर्यायवाची शब्द कौन-सा है?

- Ans
- ☒ 1. भवन
 - ☒ 2. घर
 - ☒ 3. आवास
 - ☒ 4. कोट

Question ID : 630680606245
Option 1 ID : 6306802372189
Option 2 ID : 6306802372191
Option 3 ID : 6306802372190
Option 4 ID : 6306802372192

Q.14 'कान में तेल डालना' मुहावरों का उचित अर्थ बताये।

- Ans
- ☒ 1. भाग जाना
 - ☒ 2. गुस्सा होना
 - ☒ 3. जान-बुझकर हानिकारक कार्य करना
 - ☒ 4. ध्यान न देना

Question ID : 630680606121
Option 1 ID : 6306802371732
Option 2 ID : 6306802371729
Option 3 ID : 6306802371730
Option 4 ID : 6306802371731

Q.15 निम्नलिखित में से 'घर पर फूस नहीं नाम धनपत' लोकोक्ति का क्या तात्पर्य है?

- Ans
- ☒ 1. पल-पल में स्वभाव बदलना
 - ☒ 2. गुण कुछ नहीं पर गुणवान कहलाने की इच्छा
 - ☒ 3. आपसी फूट से हानि
 - ☒ 4. लाभ के बदले हानि

Question ID : 630680606081
Option 1 ID : 6306802371581
Option 2 ID : 6306802371584
Option 3 ID : 6306802371583
Option 4 ID : 6306802371582

Q.16 निम्नलिखित में से 'गंगा गए गंगादास जमुना गए जमुना दास' लोकोक्ति का क्या तात्पर्य है?

- Ans
- ☒ 1. अवसरवादी होना
 - ☒ 2. विपरीत दिशा में चलना
 - ☒ 3. पवित्र नदी में स्नान करना
 - ☒ 4. परिचित व्यक्तियों का आपस में टकराना

Question ID : 630680606082
Option 1 ID : 6306802371585
Option 2 ID : 6306802371586
Option 3 ID : 6306802371587
Option 4 ID : 6306802371588

Q.17 निम्नलिखित में से 'एकता' का पर्यायवाची शब्द कौन-सा है?

- Ans
- ☒ 1. सरलता
 - ☒ 2. विकास
 - ☒ 3. समानता
 - ☒ 4. सुगम

Question ID : 630680606160
Option 1 ID : 6306802371874
Option 2 ID : 6306802371876
Option 3 ID : 6306802371873
Option 4 ID : 6306802371875

Q.18 निम्नलिखित में से 'अतल' का विलोम शब्द कौन-सा है?

- Ans ☒ 1. वितल
☒ 2. प्रतल
☒ 3. सतल
☒ 4. तल

Question ID : 630680606162
Option 1 ID : 6306802371883
Option 2 ID : 6306802371884
Option 3 ID : 6306802371882
Option 4 ID : 6306802371881

Q.19 'नरोत्तम' शब्द का निम्न में से कौन सही संधि विच्छेद है?

- Ans ☒ 1. नर + उत्तम
☒ 2. नरो + उत्तम
☒ 3. न + रोतम
☒ 4. न + उतम

Question ID : 630680605999
Option 1 ID : 6306802371278
Option 2 ID : 6306802371279
Option 3 ID : 6306802371280
Option 4 ID : 6306802371277

Q.20 निम्नलिखित में से 'अंतिम घड़ियां गिनना' मुहावरे का क्या तात्पर्य है?

- Ans ☒ 1. व्यर्थ ममत्व
☒ 2. मौत के निकट पहुंचना
☒ 3. आगे पीछे कुछ ना देखना
☒ 4. बार-बार घड़ी को देखना

Question ID : 630680606036
Option 1 ID : 6306802371414
Option 2 ID : 6306802371415
Option 3 ID : 6306802371416
Option 4 ID : 6306802371413

Section : Test of Hindi Language and Comprehension 2

Q.1 इनमें से अपादान कारक की विभक्ति क्या है?

- Ans ☒ 1. ने
☒ 2. को
☒ 3. से
☒ 4. के लिए

Question ID : 630680606007
Option 1 ID : 6306802371309
Option 2 ID : 6306802371310
Option 3 ID : 6306802371311
Option 4 ID : 6306802371312

Q.2 निम्न में से अपादान कारक युक्त वाक्य कौन-सा है?

- Ans ☒ 1. पेड़ से पत्ते गिरते हैं।
☒ 2. माँ ने बच्चों को बुलाया।
☒ 3. राम ने खाया।
☒ 4. शिकारी ने खरगोश मारा।

Question ID : 630680620078
Option 1 ID : 6306802426224
Option 2 ID : 6306802426222
Option 3 ID : 6306802426223
Option 4 ID : 6306802426221

Q.3 हमारे देश का नाम 'भारत' है यहां भारत कौन सी संज्ञा है?

- Ans ☒ 1. समूहवाचक संज्ञा
☒ 2. जातिवाचक संज्ञा
☒ 3. व्यक्तिवाचक संज्ञा
☒ 4. द्रव्य वाचक संज्ञा

Question ID : 630680606048
Option 1 ID : 6306802371463
Option 2 ID : 6306802371461
Option 3 ID : 6306802371462
Option 4 ID : 6306802371464

Q.4 विशेषण के मुख्य रूप से कितने भेद होते हैं?

- Ans ☒ 1. पाँच
☒ 2. चार
☒ 3. तीन
☒ 4. छह

Question ID : 630680606009
Option 1 ID : 6306802371319
Option 2 ID : 6306802371318
Option 3 ID : 6306802371317
Option 4 ID : 6306802371320

Q.5 'मेरा जी घबराता है' निम्न वाक्य में कौन-सी क्रिया है?

- Ans ☒ 1. प्रेरणार्थक
☒ 2. सकर्मक
☒ 3. संयुक्त
☒ 4. अकर्मक

Question ID : 630680606178
Option 1 ID : 6306802371947
Option 2 ID : 6306802371945
Option 3 ID : 6306802371948
Option 4 ID : 6306802371946

Comprehension:

“किसी बात की प्राप्ति केवल इच्छा –मात्र से नहीं होती , केवल चाहने से नहीं होती , बल्कि उसके लिए अध्यवसाय करना पड़ता है। श्रम का वरण करना पड़ता है। घोर आपदाओं और संकटों में भी अपने कर्तव्य से विचलित नहीं होनेवाला व्यक्ति ही विजयी होता है। संसार में जितने भी महान पुरुष हुए हैं, उन्होंने प्रतिकूल परिस्थितियों से जमकर संघर्ष किया और धैर्यपूर्वक निर्भय होकर दृढ़ संकल्प के साथ कदम आगे बढ़ाते चले गये। सागर की गहराई से डरकर किनारे पर बैठे रहनेवाले बौराहों के हाथ मोती कैसे लग सकता है।”
उपयुक्त गद्यांश के आधार पर निम्न प्रश्नों के उत्तर दे –

SubQuestion No : 6

Q.6 'प्रतिकूल' शब्द में कौन-सा समास है?

- Ans** ☒ 1. सम्बन्ध तत्पुरुष
☒ 2. अव्ययीभाव समास
☒ 3. कर्मधारय तत्पुरुष
☒ 4. सम्प्रदान तत्पुरुष

Question ID : 630680606106
Option 1 ID : 6306802371676
Option 2 ID : 6306802371674
Option 3 ID : 6306802371675
Option 4 ID : 6306802371673

Comprehension:

“किसी बात की प्राप्ति केवल इच्छा –मात्र से नहीं होती , केवल चाहने से नहीं होती , बल्कि उसके लिए अध्यवसाय करना पड़ता है। श्रम का वरण करना पड़ता है। घोर आपदाओं और संकटों में भी अपने कर्तव्य से विचलित नहीं होनेवाला व्यक्ति ही विजयी होता है। संसार में जितने भी महान पुरुष हुए हैं, उन्होंने प्रतिकूल परिस्थितियों से जमकर संघर्ष किया और धैर्यपूर्वक निर्भय होकर दृढ़ संकल्प के साथ कदम आगे बढ़ाते चले गये। सागर की गहराई से डरकर किनारे पर बैठे रहनेवाले बौराहों के हाथ मोती कैसे लग सकता है।”
उपयुक्त गद्यांश के आधार पर निम्न प्रश्नों के उत्तर दे –

SubQuestion No : 7

Q.7 निम्न में से 'इच्छा' का विलोम शब्द क्या होगा?

- Ans** ☒ 1. दुविधा
☒ 2. परिच्छा
☒ 3. प्रतीक्षा
☒ 4. अनिच्छा

Question ID : 630680606107
Option 1 ID : 6306802371679
Option 2 ID : 6306802371678
Option 3 ID : 6306802371680
Option 4 ID : 6306802371677

Comprehension:

“किसी बात की प्राप्ति केवल इच्छा –मात्र से नहीं होती , केवल चाहने से नहीं होती , बल्कि उसके लिए अध्यवसाय करना पड़ता है। श्रम का वरण करना पड़ता है। घोर आपदाओं और संकटों में भी अपने कर्तव्य से विचलित नहीं होनेवाला व्यक्ति ही विजयी होता है। संसार में जितने भी महान पुरुष हुए हैं, उन्होंने प्रतिकूल परिस्थितियों से जमकर संघर्ष किया और धैर्यपूर्वक निर्भय होकर दृढ़ संकल्प के साथ कदम आगे बढ़ाते चले गये। सागर की गहराई से डरकर किनारे पर बैठे रहनेवाले बौराहों के हाथ मोती कैसे लग सकता है।”
उपयुक्त गद्यांश के आधार पर निम्न प्रश्नों के उत्तर दे –

SubQuestion No : 8

Q.8 कैसा व्यक्ति विजयी होता है?

- Ans
- ☒ 1. किनारे पर बैठे रहने वाला
 - ☒ 2. किसी बात की इच्छा रखने वाला
 - ☒ 3. संकटों से भागने वाला
 - ☒ 4. जो कर्तव्य से विचलित ना हो

Question ID : 630680606104
Option 1 ID : 6306802371668
Option 2 ID : 6306802371667
Option 3 ID : 6306802371665
Option 4 ID : 6306802371666

Comprehension:

“किसी बात की प्राप्ति केवल इच्छा –मात्र से नहीं होती , केवल चाहने से नहीं होती , बल्कि उसके लिए अध्यवसाय करना पड़ता है। श्रम का वरण करना पड़ता है। घोर आपदाओं और संकटों में भी अपने कर्तव्य से विचलित नहीं होनेवाला व्यक्ति ही विजयी होता है। संसार में जितने भी महान पुरुष हुए हैं, उन्होंने प्रतिकूल परिस्थितियों से जमकर संघर्ष किया और धैर्यपूर्वक निर्भय होकर दृढ़ संकल्प के साथ कदम आगे बढ़ाते चले गये। सागर की गहराई से डरकर किनारे पर बैठे रहनेवाले बौराहों के हाथ मोती कैसे लग सकता है।”
उपयुक्त गद्यांश के आधार पर निम्न प्रश्नों के उत्तर दे –

SubQuestion No : 9

Q.9 विजय का विलोम शब्द बताये।

- Ans
- ☒ 1. अविजय
 - ☒ 2. पराजय
 - ☒ 3. अजय
 - ☒ 4. प्रभाव

Question ID : 630680606103
Option 1 ID : 6306802371661
Option 2 ID : 6306802371664
Option 3 ID : 6306802371662
Option 4 ID : 6306802371663

Comprehension:

“किसी बात की प्राप्ति केवल इच्छा –मात्र से नहीं होती , केवल चाहने से नहीं होती , बल्कि उसके लिए अध्यवसाय करना पड़ता है। श्रम का वरण करना पड़ता है। घोर आपदाओं और संकटों में भी अपने कर्तव्य से विचलित नहीं होनेवाला व्यक्ति ही विजयी होता है। संसार में जितने भी महान पुरुष हुए हैं, उन्होंने प्रतिकूल परिस्थितियों से जमकर संघर्ष किया और धैर्यपूर्वक निर्भय होकर दृढ़ संकल्प के साथ कदम आगे बढ़ाते चले गये। सागर की गहराई से डरकर किनारे पर बैठे रहनेवाले बौराहों के हाथ मोती कैसे लग सकता है।”
उपयुक्त गद्यांश के आधार पर निम्न प्रश्नों के उत्तर दे –

SubQuestion No : 10

Q.10 'महापुरुष' शब्द में कौन – सा समास है?

- Ans ☒ 1. कर्मधारय तत्पुरुष
☐ 2. सम्प्रदान तत्पुरुष
☐ 3. अधिकरण तत्पुरुष
☐ 4. सम्बन्ध तत्पुरुष

Question ID : 630680606105
Option 1 ID : 6306802371671
Option 2 ID : 6306802371670
Option 3 ID : 6306802371669
Option 4 ID : 6306802371672

Comprehension:

उपयुक्त गद्यांश के आधार पर निम्न प्रश्नों के उत्तर दे -

“अस्पताल में मेरी नाम की एक नर्स थी। अपने विवाह के दिन वह ड्यूटी पर थी। अपनी ड्यूटी पूरी करने के बाद वह घर गयी। दो घंटे बाद उसका विवाह होना था। उसने अपनी यूनिफार्म उतारी और वधू की पोशाक पहन ली। फिर वह गिरजाघर गयी। रास्ते में उसने फूल खरीदे। वह विवाह के समय से दस मिनट पहले गिरजाघर पहुँच गयी। गिरजाघर में कोई भी नहीं था। वर विवाह के समय के दस मिनट बाद पहुँचा। लेकिन मेरी ने उससे विवाह करने से इनकार कर दिया। उसने कहा, 'जो व्यक्ति अपने विवाह के अवसर पर भी समय की पाबंदी नहीं बरतता, वह जीवन में ऐसा किस प्रकार कर पायेगा। मैं ऐसे व्यक्ति के साथ विवाह करके अपना जीवन बिगाड़ना नहीं चाहती हूँ।' ऐसा कहकर वह अपने घर की ओर चल पड़ी। वर बहुत लज्जित हुआ और उदास लौट गया।”

SubQuestion No : 11

Q.11 मेरी ने विवाह के पूर्व क्या नहीं किया?

- Ans ☐ 1. वह वर को देखने गयी
☐ 2. उसने फूल खरीदे
☐ 3. उसने अस्पताल में अपनी ड्यूटी की
☒ 4. उसने वधू की पोशाक पहनी

Question ID : 630680620081
Option 1 ID : 6306802426229
Option 2 ID : 6306802426232
Option 3 ID : 6306802426231
Option 4 ID : 6306802426230

Comprehension:

उपयुक्त गद्यांश के आधार पर निम्न प्रश्नों के उत्तर दे -

“अस्पताल में मेरी नाम की एक नर्स थी। अपने विवाह के दिन वह ड्यूटी पर थी। अपनी ड्यूटी पूरी करने के बाद वह घर गयी। दो घंटे बाद उसका विवाह होना था। उसने अपनी यूनिफार्म उतारी और वधू की पोशाक पहन ली। फिर वह गिरजाघर गयी। रास्ते में उसने फूल खरीदे। वह विवाह के समय से दस मिनट पहले गिरजाघर पहुँच गयी। गिरजाघर में कोई भी नहीं था। वर विवाह के समय के दस मिनट बाद पहुँचा। लेकिन मेरी ने उससे विवाह करने से इनकार कर दिया। उसने कहा, 'जो व्यक्ति अपने विवाह के अवसर पर भी समय की पाबंदी नहीं बरतता, वह जीवन में ऐसा किस प्रकार कर पायेगा। मैं ऐसे व्यक्ति के साथ विवाह करके अपना जीवन बिगाड़ना नहीं चाहती हूँ।' ऐसा कहकर वह अपने घर की ओर चल पड़ी। वर बहुत लज्जित हुआ और उदास लौट गया।”

SubQuestion No : 12

Q.12 निम्नलिखित में से मेरी के विवाह से इंकार करने का मुख्या कारण कौन-सा था?

- Ans
- ☒ 1. कर्तव्य-भावना
 - ☒ 2. अभिमान की भावना
 - ☒ 3. धर्मनिष्ठा
 - ☒ 4. अनुशासनप्रियता

Question ID : 630680620082
Option 1 ID : 6306802426233
Option 2 ID : 6306802426236
Option 3 ID : 6306802426234
Option 4 ID : 6306802426235

Comprehension:

उपयुक्त गद्यांश के आधार पर निम्न प्रश्नों के उत्तर दे -

“अस्पताल में मेरी नाम की एक नर्स थी। अपने विवाह के दिन वह ड्यूटी पर थी। अपनी ड्यूटी पूरी करने के बाद वह घर गयी। दो घंटे बाद उसका विवाह होना था। उसने अपनी यूनिफार्म उतारी और वधू की पोशाक पहन ली। फिर वह गिरजाघर गयी। रास्ते में उसने फूल खरीदे। वह विवाह के समय से दस मिनट पहले गिरजाघर पहुँच गयी। गिरजाघर में कोई भी नहीं था। वर विवाह के समय के दस मिनट बाद पहुँचा। लेकिन मेरी ने उससे विवाह करने से इनकार कर दिया। उसने कहा, 'जो व्यक्ति अपने विवाह के अवसर पर भी समय की पाबंदी नहीं बरतता, वह जीवन में ऐसा किस प्रकार कर पायेगा। मैं ऐसे व्यक्ति के साथ विवाह करके अपना जीवन बिगाड़ना नहीं चाहती हूँ।' ऐसा कहकर वह अपने घर की ओर चल पड़ी। वर बहुत लज्जित हुआ और उदास लौट गया।”

SubQuestion No : 13

Q.13 'जो व्यक्ति अपने विवाह के अवसर पर भी समय की पाबंदी नहीं बरतता वह जीवन में ऐसा किस प्रकार कर पायेगा।' मेरी की इस उक्ति से उसके चरित्र का कौन सा गुण प्रकट होता है ?

- Ans
- ☒ 1. स्पष्टवादिता।
 - ☒ 2. वर के प्रति निरादर।
 - ☒ 3. अशिष्टता।
 - ☒ 4. अभ्रदता।

Question ID : 630680620084
Option 1 ID : 6306802426241
Option 2 ID : 6306802426243
Option 3 ID : 6306802426244
Option 4 ID : 6306802426242

Comprehension:

उपयुक्त गद्यांश के आधार पर निम्न प्रश्नों के उत्तर दे -

“अस्पताल में मेरी नाम की एक नर्स थी। अपने विवाह के दिन वह ड्यूटी पर थी। अपनी ड्यूटी पूरी करने के बाद वह घर गयी। दो घंटे बाद उसका विवाह होना था। उसने अपनी यूनिफार्म उतारी और वधू की पोशाक पहन ली। फिर वह गिरजाघर गयी। रास्ते में उसने फूल खरीदे। वह विवाह के समय से दस मिनट पहले गिरजाघर पहुँच गयी। गिरजाघर में कोई भी नहीं था। वर विवाह के समय के दस मिनट बाद पहुँचा। लेकिन मेरी ने उससे विवाह करने से इनकार कर दिया। उसने कहा, 'जो व्यक्ति अपने विवाह के अवसर पर भी समय की पाबंदी नहीं बरतता, वह जीवन में ऐसा किस प्रकार कर पायेगा। मैं ऐसे व्यक्ति के साथ विवाह करके अपना जीवन बिगाड़ना नहीं चाहती हूँ।' ऐसा कहकर वह अपने घर की ओर चल पड़ी। वर बहुत लज्जित हुआ और उदास लौट गया।”

SubQuestion No : 14

Q.14 जो व्यक्ति अपने विवाह के अवसर पर भी समय की पाबंदी नहीं बरता वह जीवन में ऐसा किस प्रकार कर पायेगा। 'यहाँ' 'ऐसा' शब्द से क्या तात्पर्य है?

- Ans
- ☒ 1. गिरजाघर जाना।
 - ☒ 2. युनिफॉर्म बदलना।
 - ☒ 3. फूल खरीदना।
 - ☒ 4. समय पर पहुँचना।

Question ID : 630680620083
Option 1 ID : 6306802426239
Option 2 ID : 6306802426238
Option 3 ID : 6306802426237
Option 4 ID : 6306802426240

Comprehension:

उपयुक्त गद्यांश के आधार पर निम्न प्रश्नों के उत्तर दे -

“अस्पताल में मेरी नाम की एक नर्स थी। अपने विवाह के दिन वह ड्यूटी पर थी। अपनी ड्यूटी पूरी करने के बाद वह घर गयी। दो घंटे बाद उसका विवाह होना था। उसने अपनी यूनिफार्म उतारी और वधू की पोशाक पहन ली। फिर वह गिरजाघर गयी। रास्ते में उसने फूल खरीदे। वह विवाह के समय से दस मिनट पहले गिरजाघर पहुँच गयी। गिरजाघर में कोई भी नहीं था। वर विवाह के समय के दस मिनट बाद पहुँचा। लेकिन मेरी ने उससे विवाह करने से इनकार कर दिया। उसने कहा, 'जो व्यक्ति अपने विवाह के अवसर पर भी समय की पाबंदी नहीं बरतता, वह जीवन में ऐसा किस प्रकार कर पायेगा। मैं ऐसे व्यक्ति के साथ विवाह करके अपना जीवन बिगाड़ना नहीं चाहती हूँ।' ऐसा कहकर वह अपने घर की ओर चल पड़ी। वर बहुत लज्जित हुआ और उदास लौट गया।”

SubQuestion No : 15

Q.15 विवाह कहाँ होना था?

- Ans
- ☒ 1. वर के घर में
 - ☒ 2. गिरजाघर में
 - ☒ 3. वधू के घर में
 - ☒ 4. अस्पताल में

Question ID : 630680620080
Option 1 ID : 6306802426226
Option 2 ID : 6306802426227
Option 3 ID : 6306802426225
Option 4 ID : 6306802426228

Comprehension:

निम्नलिखित गद्यांश को ध्यानपूर्वक पढ़िए और पूछे गए प्रश्न का सही विकल्प चुनिये।

“हिंदी साहित्य के इतिहास में भक्ति काल स्वर्ण युग माना जाता है। महाकवि सूरदास, तुलसीदास तथा कबीर की कविता आज भी जनसाधारण के कंठ का हार बनी हुई है। सूरदास ने अपने आराध्य श्री कृष्ण को कविता का आधार बनाया था, जबकि तुलसीदास ने श्री राम को। कबीर निर्गुण भक्ति भावना के कवि थे। इन सभी में सूरदास अपना विशेष स्थान रखते हैं।

महाकवि सूरदास का जन्म 1478 ई के लगभग माना जाता है। लोगों की मान्यता है कि वह दिल्ली के समीपवर्ती गांव 'सीही' में पैदा हुए थे। सूरदास जी सारस्वत ब्राह्मण थे। उनके पिता का नाम रामदास था। उनके प्रसिद्ध ग्रंथ 'साहित्य लहरी' के पद से स्पष्ट होता है कि वह ब्रह्मभट्ट थे और चंदबरदाई के वंशज थे। कहते हैं, महाप्रभु वल्लभाचार्य जी की प्रेरणा से ही सूरदास जी ने अपने प्रसिद्ध ग्रंथ सूरसागर की रचना की थी। महाप्रभु वल्लभाचार्य जी के पुत्र विठ्ठलनाथ ने जिस 'अष्टछाप' की संयोजन की थी उसमें सूरदास जी का अग्रणी स्थान था।”

SubQuestion No : 16

Q.16 सूरदास का जन्म कब मन गया है?

- Ans ☒ 1. 1490 ई
☒ 2. 1478 ई
☒ 3. 1481 ई
☒ 4. 1500 ई

Question ID : 630680605969
Option 1 ID : 6306802371167
Option 2 ID : 6306802371165
Option 3 ID : 6306802371166
Option 4 ID : 6306802371168

Comprehension:

निम्नलिखित गद्यांश को ध्यानपूर्वक पढ़िए और पूछे गए प्रश्न का सही विकल्प चुनिये।

“हिंदी साहित्य के इतिहास में भक्ति काल स्वर्ण युग माना जाता है। महाकवि सूरदास, तुलसीदास तथा कबीर की कविता आज भी जनसाधारण के कंठ का हार बनी हुई है। सूरदास ने अपने आराध्य श्री कृष्ण को कविता का आधार बनाया था, जबकि तुलसीदास ने श्री राम को। कबीर निर्गुण भक्ति भावना के कवि थे। इन सभी में सूरदास अपना विशेष स्थान रखते हैं।

महाकवि सूरदास का जन्म 1478 ई के लगभग माना जाता है। लोगों की मान्यता है कि वह दिल्ली के समीपवर्ती गांव 'सीही' में पैदा हुए थे। सूरदास जी सारस्वत ब्राह्मण थे। उनके पिता का नाम रामदास था। उनके प्रसिद्ध ग्रंथ 'साहित्य लहरी' के पद से स्पष्ट होता है कि वह ब्रह्मभट्ट थे और चंदबरदाई के वंशज थे। कहते हैं, महाप्रभु वल्लभाचार्य जी की प्रेरणा से ही सूरदास जी ने अपने प्रसिद्ध ग्रंथ सूरसागर की रचना की थी। महाप्रभु वल्लभाचार्य जी के पुत्र विठ्ठलनाथ ने जिस 'अष्टछाप' की संयोजन की थी उसमें सूरदास जी का अग्रणी स्थान था।”

SubQuestion No : 17

Q.17 दिए गए गद्यांश के आधार पर निम्न में से कौन सा कथन सत्य नहीं है?

- Ans ☒ 1. साहित्य लहरी सूरदास का एक प्रसिद्ध ग्रंथ है
☒ 2. साहित्य लहरी के पद से स्पष्ट होता है कि सूरदास ब्रह्मभट्ट थे और चंदबरदाई के वंशज थे
☒ 3. महाप्रभु विठ्ठलनाथ जी की प्रेरणा से ही सूरदास जी ने अपने प्रसिद्ध ग्रंथ सूरसागर की रचना की थी
☒ 4. तुलसीदास ने श्री राम को कविता का आधार बनाया था

Question ID : 630680605972
Option 1 ID : 6306802371179
Option 2 ID : 6306802371178
Option 3 ID : 6306802371180
Option 4 ID : 6306802371177

Comprehension:

निम्नलिखित गद्यांश को ध्यानपूर्वक पढ़िए और पूछे गए प्रश्न का सही विकल्प चुनिये।

“हिंदी साहित्य के इतिहास में भक्ति काल स्वर्ण युग माना जाता है। महाकवि सूरदास, तुलसीदास तथा कबीर की कविता आज भी जनसाधारण के कंठ का हार बनी हुई है। सूरदास ने अपने आराध्य श्री कृष्ण को कविता का आधार बनाया था, जबकि तुलसीदास ने श्री राम को। कबीर निर्गुण भक्ति भावना के कवि थे। इन सभी में सूरदास अपना विशेष स्थान रखते हैं।

महाकवि सूरदास का जन्म 1478 ई के लगभग माना जाता है। लोगों की मान्यता है कि वह दिल्ली के समीपवर्ती गांव 'सीही' में पैदा हुए थे। सूरदास जी सारस्वत ब्राह्मण थे। उनके पिता का नाम रामदास था। उनके प्रसिद्ध ग्रंथ 'साहित्य लहरी' के पद से स्पष्ट होता है कि वह ब्रह्मभट्ट थे और चंदबरदाई के वंशज थे। कहते हैं, महाप्रभु वल्लभाचार्य जी की प्रेरणा से ही सूरदास जी ने अपने प्रसिद्ध ग्रंथ सूरसागर की रचना की थी। महाप्रभु वल्लभाचार्य जी के पुत्र विठ्ठलनाथ ने जिस 'अष्टछाप' की संयोजन की थी उसमें सूरदास जी का अग्रणी स्थान था।”

SubQuestion No : 18

Q.18 सूरदास के किसे अपनी कविताओं का आधार बनाया था?

- Ans
- ☒ 1. माँ दुर्गा को
 - ☒ 2. श्रीराम को
 - ☒ 3. श्री हरी को
 - ☒ 4. श्रीकृष्ण को

Question ID : 630680605970
Option 1 ID : 6306802371172
Option 2 ID : 6306802371169
Option 3 ID : 6306802371171
Option 4 ID : 6306802371170

Comprehension:

निम्नलिखित गद्यांश को ध्यानपूर्वक पढ़िए और पूछे गए प्रश्न का सही विकल्प चुनिये।

“हिंदी साहित्य के इतिहास में भक्ति काल स्वर्ण युग माना जाता है। महाकवि सूरदास, तुलसीदास तथा कबीर की कविता आज भी जनसाधारण के कंठ का हार बनी हुई है। सूरदास ने अपने आराध्य श्री कृष्ण को कविता का आधार बनाया था, जबकि तुलसीदास ने श्री राम को। कबीर निर्गुण भक्ति भावना के कवि थे। इन सभी में सूरदास अपना विशेष स्थान रखते हैं।

महाकवि सूरदास का जन्म 1478 ई के लगभग माना जाता है। लोगों की मान्यता है कि वह दिल्ली के समीपवर्ती गांव 'सीही' में पैदा हुए थे। सूरदास जी सारस्वत ब्राह्मण थे। उनके पिता का नाम रामदास था। उनके प्रसिद्ध ग्रंथ 'साहित्य लहरी' के पद से स्पष्ट होता है कि वह ब्रह्मभट्ट थे और चंदबरदाई के वंशज थे। कहते हैं, महाप्रभु वल्लभाचार्य जी की प्रेरणा से ही सूरदास जी ने अपने प्रसिद्ध ग्रंथ सूरसागर की रचना की थी। महाप्रभु वल्लभाचार्य जी के पुत्र विठ्ठलनाथ ने जिस 'अष्टछाप' की संयोजन की थी उसमें सूरदास जी का अग्रणी स्थान था।”

SubQuestion No : 19

Q.19 हिन्दी साहित्य के इतिहास का स्वर्णम युग किसे माना जाता है?

- Ans
- ☒ 1. रीतिकाल को
 - ☒ 2. प्रगतिवाद को
 - ☒ 3. भक्ति काल को
 - ☒ 4. छायावाद को

Question ID : 630680605968
Option 1 ID : 6306802371161
Option 2 ID : 6306802371164
Option 3 ID : 6306802371162
Option 4 ID : 6306802371163

Comprehension:

निम्नलिखित गद्यांश को ध्यानपूर्वक पढ़िए और पूछे गए प्रश्न का सही विकल्प चुनिये।

“हिंदी साहित्य के इतिहास में भक्ति काल स्वर्ण युग माना जाता है। महाकवि सूरदास, तुलसीदास तथा कबीर की कविता आज भी जनसाधारण के कंठ का हार बनी हुई है। सूरदास ने अपने आराध्य श्री कृष्ण को कविता का आधार बनाया था, जबकि तुलसीदास ने श्री राम को। कबीर निर्गुण भक्ति भावना के कवि थे। इन सभी में सूरदास अपना विशेष स्थान रखते हैं।

महाकवि सूरदास का जन्म 1478 ई के लगभग माना जाता है। लोगों की मान्यता है कि वह दिल्ली के समीपवर्ती गांव 'सीही' में पैदा हुए थे। सूरदास जी सारस्वत ब्राह्मण थे। उनके पिता का नाम रामदास था। उनके प्रसिद्ध ग्रंथ 'साहित्य लहरी' के पद से स्पष्ट होता है कि वह ब्रह्मभट्ट थे और चंदबरदाई के वंशज थे। कहते हैं, महाप्रभु वल्लभाचार्य जी की प्रेरणा से ही सूरदास जी ने अपने प्रसिद्ध ग्रंथ सूरसागर की रचना की थी। महाप्रभु वल्लभाचार्य जी के पुत्र विठ्ठलनाथ ने जिस 'अष्टछाप' की संयोजन की थी उसमें सूरदास जी का अग्रणी स्थान था।”

SubQuestion No : 20

Q.20 निम्न में से कौन से कवि निर्गुण भक्ति भावना के कवि थे?

- Ans
- ☒ 1. तुलसीदास
 - ☒ 2. कबीर
 - ☒ 3. वल्लभाचार्य
 - ☒ 4. सूरदास

Question ID : 630680605971

Option 1 ID : 6306802371173

Option 2 ID : 6306802371175

Option 3 ID : 6306802371174

Option 4 ID : 6306802371176

