



Teachingninja.in



Latest Govt Job updates



Private Job updates



Free Mock tests available



Visit - teachingninja.in

DSSSB JJA

Memory Based Paper
03 Mar, 2024



120 Questions

Que. 1 **Directions:** Each item in this section consists of a sentence with an underlined word followed by four words/group of words. Select the option that is nearest in meaning to the underlined word and mark your response on the answer sheet accordingly.

His already infirm body was racked by a high fever.

1. implicit
2. weak
3. obdurate
4. profligate

Correct Option - 2

Que. 2 **Direction:** Select the wrongly spelt word.

1. Concede
2. Accede
3. Precede
4. Supercede

Correct Option - 4

Que. 3 **Select the most appropriate meaning of the given idiom.**

White elephant

1. A business company in bankruptcy
2. Something that costs a lot of money but has no useful purpose
3. Something very rare and precious
4. A big lie that is concealed from all

Correct Option - 2

Que. 4 **Out of four alternatives, choose the one which can be substituted for the given word or sentence.**

A person who looks at the brighter side of things

1. Optimist
2. Optimistic
3. Pessimist
4. Pessimistic

Correct Option - 1

Que. 5 **Select the option that is incorrect spelling.**

1. quadrangle
2. quadruple
3. quadrent
4. quarter

Correct Option - 3

Que. 6 Choose the wrongly spelled word from among the given options.

1. Clendestine
2. Reproach
3. Harass
4. Accord

Correct Option - 1

Que. 7 Select the option that can be used as a one-word substitute for the underlined group of words.

He requested the bank to give him more time as at present he was unable to pay his debts.

1. Destitute
2. Meticulous
3. Reckless
4. Bankrupt

Correct Option - 4

Que. 8 Select the word which means the same as the group of words given.

That which can be heard

1. Legible
2. Edible
3. Tangible
4. Audible

Correct Option - 4

Que. 9 Select the INCORRECTLY spelt word.

1. Cemetery
2. Accommodate
3. Intruder
4. Neccessary

Correct Option - 4

Choose from the four options, the word that best defines/substitutes the given phrase.

Que. 10 "The rule by nobles"

1. Monarchy
2. Aristocracy
3. Republic
4. Autocracy

Correct Option - 2

Que. 11 Select the most appropriate synonym of the given word.

Astute

1. Shrewd
2. Dull
3. Impolite
4. Crude

Correct Option - 1

Que. 12 Select the most appropriate meaning of the given idiom.

On thin ice

1. Narrow path
2. Risky situation
3. To be silent
4. Snow-covered mountain

Correct Option - 2

Que. 13 Select the most appropriate meaning of the given idiom.

Through thick and thin

1. In good and bad times
2. With great pride
3. To work hard to the point of exhaustion
4. In every possible way

Correct Option - 1

Que. 14 Directions: Select the wrongly spelt word.

1. Ascetic
2. Bankrupcy
3. Banquet
4. Barrier

Correct Option - 2

Que. 15 Select the word which means the same as the group of words given.

A person who does not believe in God

1. Spiritualist
2. Atheist
3. Hypocrite
4. Sceptic

Correct Option - 2

Que. 16 Select the most appropriate meaning of the given idiom.

Up in the air

1. Uncertain or undecided situation
2. Flying without wings
3. The act of Skydiving
4. Hypothetical situation

Correct Option - 1

Que. 17 Four words are given in the question, out of which only one word is correctly spelt. Find the correctly spelt word.

1. Teetotaller
2. Teatotaller
3. Teetotaaler
4. Teetottaler

Correct Option - 1

Que. 18 Select the most appropriate meaning of the given idiom.

Spick and span

1. To leave a place quickly
2. To be in trouble
3. To be neat and clean
4. To be untidy

Correct Option - 3

Que. 19 Select the most appropriate meaning of the given idiom.

Yonder side of the tracks

1. A different social class or economic status often implies a significant barrier or separation

2. The prosperous and affluent part of town
3. The central and busiest area of town
4. A metaphor for a hidden or secret location in town

Correct Option - 1

Que. 20 In the questions, out of the four alternatives, choose the one which can be substituted for the given words/sentence.

Government runs its administration through departments staffed by civil servants

1. Bureaucracy
2. Democracy
3. Aristocracy
4. Oligarchy

Correct Option - 1

Que. 21 Select the most appropriate antonym of the given word.

Eager

1. Indifferent
2. Sharp
3. Great
4. Greedy

Correct Option - 1

Que. 22 Identify the degree in the sentence:

The Civil Services Examination conducted by the Union Public Service Commission is one of the toughest examinations in the world.

1. Positive Degree
2. Comparative Degree
3. Superlative Degree
4. None of these

Correct Option - 3

Que. 23 Direction: Identify the degree of comparison in the following sentence:

Apart from being an important issue regarding secularism in India, it became one of the most controversial topics in contemporary politics during the Shah Bano case in 1985.

1. comparative degree
2. positive degree
3. superlative degree
4. none of the above

Correct Option - 3

Que. 24 Select the most appropriate **ANTONYM** of the word ‘ACQUISITION’ from the given sentence.

The head coach got surprised with the level of enthusiasm shown by the players as they all were demoralised after the first loss.

1. Enthusiasm
2. Demoralised
3. Surprised
4. Loss

Correct Option - 4

Que. 25 Choose the correct antonym (word with the opposite meaning) of the headword from the four options given and mark the right option:

RESTRAIN

1. control
2. liberate
3. maintain
4. distract

Correct Option - 2

Que. 26 Identify the degree in the sentence:

At the Olympics, India has won the highest number of medals in Hockey.

1. Positive Degree
2. Superlative Degree
3. Comparative Degree
4. None of these

Correct Option - 2

Que. 27 In the following question, out of the given alternatives, choose the one which best expresses the meaning of the given word.

CAVEAT

1. Dispute
2. Challenge
3. Advice
4. Warning

Correct Option - 4

Que. 28 Identify the degree of comparison in the following sentence:

His visit to Cooch Behar can be seen as an action louder even than his words in derogation of the elected regime.

1. superlative degree
2. positive degree
3. comparative degree
4. none of the above

Correct Option - 3

Que. 29 Select the most appropriate synonym of the given word.

Ostentatious

1. Flamboyant
2. Subdued
3. Restrained
4. Appropriate

Correct Option - 1

Que. 30 Direction: Select the most appropriate synonym of the given word from the sentence.

Dangerous

The traffic police have released a safe advisory that driving without seat belts is risky, beneficial, and fearful for human life.

1. Risky
2. Beneficial
3. Safe
4. Released

Correct Option - 1

Que. 31 The following sentence has been split into four segments. Identify the segment that contains a grammatical error.

One of these / boxes have / the portrait / of the heiress.

1. the portrait
2. boxes have
3. one of these
4. of the heiress

Correct Option - 2

Que. 32 Select the most appropriate ANTONYM of the given word.

AMPLE

1. Sufficient
2. Enough
3. Liberal
4. Meagre

Correct Option - 4

Que. 33 Read the sentence given below to find out if it contains an error. The error, if any, will be in one part of the sentence. If the sentence is error-free, select No error.

The team of engineers (A)/ have discovered (B)/ a new way to reduce fuel consumption. (C)/ No error (D)

1. A
2. B
3. C
4. D

Correct Option - 2

Que. 34 Read the sentence given below to find out if it contains an error. The error, if any, will be in one part of the sentence. If the sentence is error-free, select No error.

She is one of the players (A)/ who has been (B)/ selected for the national team. (C)/ No error (D)

1. A
2. B
3. C
4. D

Correct Option - 2

Que. 35 Select the most appropriate ANTONYM of the given word.
INNOCUOUS

1. Innocent
2. Harmless
3. Harmful
4. Indifferent

Correct Option - 3

Que. 36 Read the following passage and answer the questions given after it.

Once upon a time, in a small village named Shankarpur, lived a young boy named Ramu. He was different from the other kids in the village, not because he was the fastest runner or the highest jumper, but because he cared deeply about the environment. Ramu loved spending time in the lush green fields surrounding the village. He would often go for long walks, admiring the chirping birds, the beautiful trees, and the clear blue sky. However, Ramu noticed that not everyone in his village shared his love for nature. He would see piles of

litter near the river, plastic bags tangled in the branches of trees, and smoke from the factories clouding the clear sky. This made Ramu very sad. One day, he decided to make a change. He started by picking up the litter near the river every day after school. When the villagers saw Ramu doing this, they asked him why. Ramu replied, "If we don't take care of our environment, it won't take care of us. Every little thing we do counts." This simple yet profound answer made some villagers think. They noticed the difference Ramu was making and decided to join him. They started cleaning their surroundings, too. Slowly, the river started to look clean, and the trees looked happier without the plastic bags. However, the smoke from the factories was still a problem. So, Ramu thought of a solution. He approached the factory owners and told them about the harmful effects of the smoke on the environment. Initially, they didn't listen to him, but Ramu was persistent. He explained how they could use cleaner fuels and better technology to reduce pollution. Impressed by Ramu's dedication and knowledge, the factory owners agreed to make changes. Months passed, and Shankarpur started to transform. The river was clean, the sky was clear, and the village was greener than ever. All thanks to Ramu and his relentless efforts. He showed his village, and all of us, that every little effort counts when it comes to protecting the environment. And so, Ramu, the sensitive environmental warrior, continued his green quest, inspiring others, young and old, to join him in caring for our precious Earth. He proved that no one is too small to make a difference. It was a reminder to us all: if we want to keep enjoying the beauty of nature, we must protect it.

What was the significant lesson demonstrated by Ramu's actions in safeguarding the environment?

- 1. That all factories are harmful to the environment
- 2. That no one is too small to make a difference
- 3. That everyone is too small to make a difference
- 4. That only young people can make a difference.

Correct Option - 2

Que. 37 What set Ramu apart from the other children in Shankarpur village?

- 1. He cared deeply about the environment.
- 2. He jumped the highest.
- 3. He was the smartest kid in school.
- 4. He was the fastest runner.

Correct Option - 1

Que. 38 How did Ramu initially address the issue of litter in the village?

- 1. He organized a protest against littering.
- 2. He asked the village authorities to clean up.
- 3. He stopped using plastic bags.
- 4. He picked up the litter near the river every day after school.

Correct Option - 4

Que. 39 What action did Ramu take to tackle the issue of smoke emitted by the factories?

- 1. He moved out of the village to escape the smoke
- 2. He approached the factory owners and suggested ways to reduce pollution.
- 3. He protested outside the factories.

4. He stopped buying products made by the factories.

Correct Option - 2

Que. 40 Which phrase best encapsulates Ramu's attitude towards environmental conservation?

1. The environment will fix itself.
2. One person can't make a difference.
3. Big actions are the only solution.
4. Every small effort counts.

Correct Option - 4

Que. 41 Choose the correct alternative which will improve the part of the sentence given in bold.
Is it true that Gautam is currently engaged **with** writing a book about Bengali humor?

1. of
2. for
3. at
4. in

Correct Option - 4

Que. 42 **Direction: Each of the following items in this section consists of a sentence, parts of which have been jumbled. These parts have been labelled as P, Q, R and S. You are required to re-arrange the jumbled parts of the sentence and mark your responses.**

two friends of ours (P)/ he's been stalking (Q)/ where he killed (R)/ us all the way from New Hampshire (S)/

1. PQRS
2. QSRP
3. SRQP
4. PSRQ

Correct Option - 2

Que. 43 **Directions: Select the most appropriate option to improve the underlined segment in the given sentence. If there is no need to improve it, select 'No improvement'.**

The ladder stood by the wall, making it easy for the thieves to enter the house.

1. against the wall
2. on the wall
3. No improvement
4. over the wall

Correct Option - 1

Que. 44 Given here are four sentences. The first sentence is in the correct order, while the rest of the sentences are jumbled. Pick the option that gives the correct order.

- A. In June 1946 an aeroplane travelled from Rome to Paris, crossing over the Mediterranean Sea.
- B. an American author, educator, and activist who since childhood had been both blind and deaf.
- C. one of its passengers became its pilot, the passenger was Dr Helen Keller,
- D. There was nothing unusual about this flight except one thing: for 20 minutes of the plane's journey,

- 1. ADBC
- 2. ADCB
- 3. ACDB
- 4. ACBD

Correct Option - 2

Que. 45 Direction: Each of the following items in this section consists of a sentence, parts of which have been jumbled. These parts have been labeled as P, Q, R, and S. You are required to re-arrange the jumbled parts of the sentence and mark your responses.

some curtains and rugs in the attic (P)/ it wasn't the first time (Q)/but this morning she had run across (R)/ she had done so, (S)/

- 1. QSRP
- 2. PSRQ
- 3. SPRQ
- 4. RQSP

Correct Option - 1

Que. 46 Directions: Fill in the blank with the most appropriate option.

_____ students were seen jumping the school wall.

- 1. The few
- 2. A few
- 3. None
- 4. Any

Correct Option - 2

Que. 47 Directions: Select the most appropriate option to improve the underlined segment in the given sentence. If there is no need to improve it, select 'No improvement'.

The boy was considered a talented footballer by the coach.

- 1. was consider
- 2. was considering
- 3. No improvement
- 4. was consideration

Correct Option - 3

Que. 48 Select the most appropriate option to fill in the blank.

My brother Anurag is one year _____ than your brother Rohit.

1. oldest
2. older
3. elder
4. eldest

Correct Option - 2

Que. 49 Select the most appropriate option to fill in the blanks and make the sentence meaningful.

I taught my son the _____ way to tie a _____.

1. right; not
2. write; knot
3. right; knot
4. write; not

Correct Option - 3

Que. 50 **Direction:** Each of the following items in this section consists of a sentence, parts of which have been jumbled. These parts have been labelled as P, Q, R and S. You are required to re-arrange the jumbled parts of the sentence and mark your responses.

but there were some basic things (P)/ that could be done (Q)/ Alex and Jonathan (R)/ wanted to help decorate, (S)/

1. PQRS
2. SRQP
3. RSPQ
4. RSQP

Correct Option - 3

Que. 51 **Direction:** Choose the correct form of the verb that is in agreement with the subject:

The student or the committee members _____ every day and each of the members _____ most welcome for that.

1. write, are
2. write, is
3. writes, is
4. write, were

Correct Option - 2

Que. 52 Choose the correct alternative which will improve the part of the sentence given in bold.

Your son is a bit weak upon the Science subject, but he is trying to improve.

1. of
2. in
3. with
4. for

Correct Option - 2

Que. 53 Given here are four sentences. The first sentence is in correct order, while the rest of the sentences are jumbled. Pick the option that gives their correct order.

- A. We make a lot of choices in our daily life.
- B. Living on the edge may be exciting but not always the right thing to do.
- C. These determine either our safety or put us in danger.
- D. Therefore, following limits is always the safer and better way of life.

1. ABCD
2. ADBC
3. ACBD
4. ABDC

Correct Option - 3

Que. 54 Choose the correct alternative which will improve the part 'towards' in the sentence given below.

If you can't finish the task by Friday, please get it done **towards** the weekend.

1. at
2. on
3. by
4. over

Correct Option - 3

Que. 55 Complete the following sentence :-

Either my own son or those children _____ all the flowers.

1. has picked
2. have picked
3. picked
4. have been picked

Correct Option - 2

Que. 56 Read the passage carefully and answer the questions below.

At the COP26 in Glasgow last year, India made two significant commitments: It promised to meet 50 percent of its energy needs from renewable fuels by 2030 and transition to a net zero carbon economy by 2070. By all accounts, the country is well on course to achieve its short-term target. Accomplishing the decarbonization target will, however, require tackling much stiffer challenges. India will need “trillions of dollars” to become carbon neutral, according to a report that lays down the country’s strategy to meet its 2070 goal. The document, released at the ongoing COP27 at Sharm El-Sheikh in Egypt, also notes that adapting to climate change could cost India more than Rs 85 trillion by 2030. In the past, funding has been a deal breaker in climate negotiations. That’s why the world’s third-highest emitter could have its task cut out. But there’s another takeaway from the document which the negotiators at Sharm El-Sheikh, especially those from the rich countries, would do well to not miss out on: A business-as-usual scenario in funding would seriously imperil the Paris Pact’s goal of keeping temperature rise down to 1.5 degrees Celsius. The strategy document does not specify mid-term targets or goals. However, the government’s other policies do offer insights into the net-zero pathway. The National Hydrogen Mission launched in 2021, for instance, aims to make India a green hydrogen hub. The country also has clean energy plans such as 20 percent ethanol blending with petrol to burn less fossil fuel by 2025 and an electric vehicle project that has been on the government’s anvil for at least five years. Using several of these technologies will require industries to make large-scale changes. Electricity’s share in industrial energy will have to multiply three-fold by 2070. Electricity-driven four-wheelers should constitute 70-80 percent of the road traffic. The recent impetus on renewables could mean that such electricity is from a clean source. However, China dominates the market of most essentials in the EV supply chain. That’s perhaps one reason the strategy document is alive to scenarios in which fossil fuels continue to constitute a significant part of the energy mix. It talks of using methods such as carbon capture and storage (CCS) to remove GHGs before they enter the atmosphere. These technologies are currently expensive and of uncertain utility. That said, in recent times, CCS has become a key constituent of decarbonisation strategies of countries such as the UK. India should find ways to make knowledge transfers in these emerging technologies part of its trade pacts with rich countries. Releasing the strategy document, Environment Minister Bhupender Yadav underlined India’s energy security concerns. India’s per capita energy consumption is barely a tenth of that of the USA — the world’s highest emitter. The country cannot afford to forgo its developmental imperatives, especially since that involves lifting a large section of its population above poverty levels. That’s why addressing the climate problem can no longer be postponed: The solution to the crisis must be found without the poor having to do the heavy lifting.

What commitments did India make at the COP26 summit?

- (i) to meet 50 percent of its energy needs from renewable fuels by 2030
- (ii) To make large-scale changes in fossil fuel to support EV manufacturers.
- (iii) To make the transition to a net zero carbon economy by 2070.

- 1. (ii), (iii)
- 2. (i), (iii)
- 3. All of the above
- 4. (i), (ii)

Correct Option - 2

Que. 57 What challenges does India need to overcome to achieve carbon neutrality?

- 1. Requirement of trillion of dollars
- 2. Removing GHGs before they enter the atmosphere
- 3. Finding ways to make knowledge transfers in these emerging technologies part of its trade pacts with rich countries
- 4. To dominate china in the domain of the EV supply chain.

Correct Option - 1

Que. 58 Which statement regarding 'The Strategy document' is inaccurate?

1. It mention that adapting to climate change could cost India more than Rs 85 trillion by 2030
2. It lays down the country's strategy to meet its 2070 goal.
3. The strategy document is also put forward that the Paris Pact's goal could be seriously imperil by funding negotiation
4. The strategy document put out the mid-term target

Correct Option - 4

Que. 59 What initiatives has the government implemented to achieve the envisioned carbon-neutral goal?

1. All of the above
2. Launching of The National Hydrogen Mission in 2021
3. An electric vehicle project has been on the table for at least five year.
4. The clean energy plan in place to burn less fossil fuel by 2025

Correct Option - 1

Que. 60 Which term is a synonym for "**carbon-neutral**" as used in the passage?

1. Carbonic
2. Carboniferous
3. Carbon-Free
4. Carbonaceous

Correct Option - 3

Que. 61 When did the Union Territories of Daman and Diu and Dadra and Nagar Haveli become a single union territory?

1. 26th January, 2019
2. 15th August, 2018
3. 26th January, 2020
4. 15th August, 2019

Correct Option - 3

Que. 62 Ashtadhyayi was written by _____.

1. Vedavyasa
2. Panini
3. Shukadeva
4. Valmiki

Correct Option - 2

Que. 63 Which is the most important festival of Assam?

1. Lumbini Festival
2. Hornbill Festival
3. Phool Dei
4. Bihu

Correct Option - 4

Que. 64 Which of the following Articles is related to the Ancillary powers of Supreme Court?

1. Article 140
2. Article 150
3. Article 138
4. Article 143

Correct Option - 1

Que. 65 In which of the following forests, Sundarban delta is found?

1. Alpine forest
2. Mangrove forest
3. Himalayan moist forest
4. Dry deciduous forest

Correct Option - 2

Que. 66 On which day do we celebrate the festival of 'Holi' according to the Hindu calendar?

1. A day after the full moon
2. New moon day
3. A day before full moon
4. Full moon day

Correct Option - 4

Que. 67 Commonwealth Games 2022 was held in _____.

1. Birmingham
2. Beijing
3. Tokyo
4. New Delhi

Correct Option - 1

Que. 68 Article of the Indian Constitution related to the Comptroller and Auditor General of India is-

1. Article 162
2. Article 123
3. Article 148
4. Article 180

Correct Option - 3

Que. 69 As per the 2011 Census, India has _____ females per 1000 males.

1. 840
2. 943
3. 990
4. 900

Correct Option - 2

Que. 70 Which of the following Biosphere Reserve is located in the northern most part of India?

1. Nanda Devi
2. Cold desert
3. Manas
4. Simlipal

Correct Option - 2

Que. 71 Central Vigilance Commission observed Vigilance Awareness Week, What is its theme?

1. "Say no to corruption; Commit to the Nation."
2. "Say no to Bribe; Commit to the Nation."
3. "Don't do Corruption, Commit to the Nation."
4. Both 1 and 2

Correct Option - 1

Que. 72 As per the 2011 census, which of the following states has the highest population in India?

1. Maharashtra
2. Uttar Pradesh
3. West Bengal
4. Bihar

Correct Option - 2

Que. 73 Which Union Territory launched two women's squads headed by Khalida Parveen, for ensuring the safety and security of women in February 2022?

1. Chandigarh

2. Ladakh
3. Puducherry
4. Jammu And Kashmir

Correct Option - 4

Que. 74 Central Institute of Indian Language is located at which of the following places ?

1. Varanasi
2. Mysore
3. New Delhi
4. Shimla

Correct Option - 2

Que. 75 Which of the following is the State Animal of Puducherry?

1. Squirrel
2. Indian rhinoceros
3. Sangai
4. Red panda

Correct Option - 1

Que. 76 Which article of the Indian Constitution states that the 'Law declared by Supreme Court is to be binding on all courts' within the territory of India?

1. Article 127
2. Article 133
3. Article 147
4. Article 141

Correct Option - 4

Que. 77 Under which Article of the Constitution, the Supreme Court of India may issue a writ for enforcement of Fundamental Rights?

1. Article 30
2. Article 44
3. Article 139
4. Article 32

Correct Option - 4

Que. 78 What was the capital of the French colony in India?

1. Pondicherry

2. Calicut
3. Cochin
4. Goa

Correct Option - 1

Que. 79 _____ was the first Indian man to win gold at Commonwealth Games 2022 held at Birmingham.

1. Murali Sreeshankar
2. Tejaswin Shankar
3. Jeremy Lalrinnunga
4. Mohit Grewal

Correct Option - 3

Que. 80 The concept of fundamental rights has been taken from the Constitution of which country?

1. United States of America
2. Ireland
3. United Kingdom
4. Russia

Correct Option - 1

Que. 81 The chemical formula of lime water is:

1. CaO
2. CaCO_3
3. $\text{Ca}(\text{HCO}_3)_2$
4. $\text{Ca}(\text{OH})_2$

Correct Option - 4

Que. 82 Chromosomal theory of inheritance was given by

1. Mendel
2. Sutton and Boveri
3. Muller
4. Waldeyer

Correct Option - 2

Que. 83 _____ is called 'the power house of the cell'.

1. Cell membrane
2. Nucleus

3. Mitochondria
4. Golgi bodies

Correct Option - 3

Que. 84 Which of the following is NOT a halogen gas?

1. Bromine
2. Neon
3. Fluorine
4. Chlorine

Correct Option - 2

Que. 85 Which of the following food nutrient is essential for growth and repair?

1. Carbohydrates
2. Proteins
3. Fats
4. Vitamins

Correct Option - 2

Que. 86 In which part of the cell are glycoproteins formed?

1. Vacuoles
2. Golgi bodies
3. Lysosomes
4. Mitochondria

Correct Option - 2

Que. 87 The Law of inertia was given by _____

1. Galileo Galilei
2. James Clerk Maxwell
3. J.J. Thomson
4. Archimedes

Correct Option - 1

Que. 88 Filaria worms belong to which of the following phylum?

1. Arthropods
2. Aschelminthes
3. Platyhelminthes
4. Annelids

Correct Option - 2

Que. 89 During eye-testing, opticians measure ‘power of lens’. What does it denotes?

- 1. The power of a lens is defined as equivalent to its focal length.
- 2. The power of a lens is defined as the reciprocal of its height
- 3. The power of a lens is defined as the ratio of its height and breath
- 4. The power of a lens is defined as the reciprocal of its focal length.

Correct Option - 4

Que. 90 Which of the following is not a type of White Blood Cell?

- 1. Erythrocytes
- 2. Neutrophils
- 3. Lymphocytes
- 4. Monocytes

Correct Option - 1

Que. 91 Select the figure that will come next in the following figure series.



- 1.
- 2.
- 3.
- 4.

Correct Option - 2

Que. 92 Which of the following numbers will replace the question mark (?) in the given series?

9, 13, 22, 38, 63, ?

1. 99
2. 100
3. 72
4. 63

Correct Option - 1

Que. 93 Seven workers Rahul, Ram, Ramesh, Sohan, Sahil, Anil and Sonu are sitting around a circular table facing towards the centre (not necessarily in the same order). Anil is immediate neighbour of both Ram and Sonu. Ram is second to the right of Sahil. Rahul is immediate neighbour of both Sahil and Sohan. Who is second to the left of Rahul?

1. Sonu
2. Ram
3. Ramesh
4. Anil

Correct Option - 1

Que. 94 If in a certain code language 'CLOUD' is written as '59432' and 'RAIN' is written as '1678', then how will 'AROUND' be written in that language?

1. 614382
2. 461382
3. 641382
4. 614832

Correct Option - 1

Que. 95 Select the correct combination of mathematical signs to replace the * signs and to balance the given equation.

$$(\sqrt{729} * 9) * 67 * 81 * (4 * 6) * 19$$

1. +, -, +, ÷, =, ×
2. ×, +, -, +, ×, =
3. +, -, ÷, =, -, ×
4. ÷, +, =, -, ×, +

Correct Option - 4

Que. 96 The sequence of folding a piece of paper and the manner in which the folded paper has been cut is shown in the following figures. How would this paper look when unfolded?



- 1.
- 2.
- 3.
- 4.

Correct Option - 3

Que. 97 In the following question below are given some statements followed by some conclusions based on those statements. Taking the given statements to be true even if they seem to be at variance from commonly known facts. Read all the conclusions and then decide which of the given conclusion logically follows the given statements.

Statements:

- I. All cherry are pink.
- II. Some blue are pink.

Conclusion:

- I. Some blue are not cherry.
- II. All pink are cherry.
- III. Some pink are cherry.

1. Both conclusions I and II follows
2. All conclusion follows
3. Only conclusion III follows
4. Neither conclusion follows

Correct Option - 3

Que. 98 Five people Mintu, Vibha, Wahid, Farhana, and Pawan like any one color out of the five different colors: Yellow, Blue, Green, Pink, and Red. Each of them has one car out of five cars: Ertiga, Swift, Innova, Baleno, and Figo. None of them likes same color and none of them have same car.

Vibha likes pink color and have Ertiga. Pawan likes blue color. Farhana have Baleno car. One who likes yellow color have Swift car. Mintu likes green color. One who likes red color sit immediately above one who blue color. Who amongst the following have swift car?

- 1. Mintu
- 2. Farhana
- 3. Wahid
- 4. Pawan

Correct Option - 3

Que. 99 **Directions:** Read the following information carefully to answer the question below.

‘A\$B’ means ‘A is mother of B’.

‘A#B’ means ‘A is father of B’.

‘A@B’ means ‘A is husband of B’

‘A%B’ means ‘A is daughter of B’

Which of the following expressions indicates ‘H is the brother of N’?

- 1. H # R \$ D \$ N
- 2. N % F @ D \$ H # R
- 3. N % F @ D % R@H
- 4. N % F @ D % H

Correct Option - 2

Que. 100 Select the correct mirror image of the given figure when the mirror is placed at the right side.



- 1.
- 2.
- 3.



Correct Option - 3

Que. 101 In a certain language, if PERSIST is written as 7591912, then how is ANCESTOR is coded in the same language?

- 1. 15351059
- 2. 14351268
- 3. 14351259
- 4. 15351269

Correct Option - 4

Que. 102 'Manipur' is related to 'Imphal' in the same way as 'Nagaland' is related to '_____'.

- 1. Aizawl
- 2. Gangtok
- 3. Shillong
- 4. Kohima

Correct Option - 4

Que. 103 In the following question, a certain series of numbers or letters is given of which one series is empty. You have to decide which of the alternative series of the answer will be used in the blank space that is originally related to the sequence of that series.

ZW19, US16, PO13, ?




- 1. KJ10
- 2. KO10
- 3. KI10
- 4. KK10

Correct Option - 4

Que. 104 Select the option figure in which the given figure (X) is embedded as its part (rotation is NOT allowed).



- 1.

2.
- 
3.
- 
4.
- 

Correct Option - 4

Que. 105 Select the figure that will replace the question mark (?) in the following figure series.



1.
- 
2.
- 
3.
- 
4.
- 

Correct Option - 2

Que. 106 Three statements are given, followed by three conclusions numbered I, II and III. Assuming the statements to be true, even if they seem to be at variance with commonly known facts, decide which of the conclusions logically follow(s) from the statements.

Statements:

1. All statements are books.
2. Some books are copies.
3. No copy is a thesaurus.

Conclusions:

- I. Some thesauruses are copies.
 - II. No statement is a thesaurus.
 - III. Some books are statements.
1. Only conclusions III follows
 2. Only conclusions II and III follow
 3. Only conclusions I and II follow
 4. Only conclusion I follows

Correct Option - 1

Que. 107 If a mirror is placed on the line AB, then out of the option figures which figure will be the right image of the question figure?



- 1.
- 2.
- 3.
- 4.

Correct Option - 1

Que. 108 If ‘A % B’ means ‘A is the father of B’, ‘A # B’ means ‘A is the brother of B’, and ‘A \$ B’ means ‘A is the wife of B’, then how is K related to R in the given expression?





K \$ H % Y # M # R

1. Father
2. Paternal grandmother

- 3. Paternal aunt
- 4. Mother

Correct Option - 4

Que. 109 Four figures have been given, out of which three are alike in some manner and one is different. Select the one that is different.

- 1. 
- 2. 
- 3. 
- 4. 

Correct Option - 4

Que. 110 Three of the four group of words are alike in some manner. Select the odd group of words.

- 1. (Sailor, Doctor, Painter)
- 2. (Engineer, Servant, Grocer)
- 3. (Factory, Garage, Casino)
- 4. (Mechanic, Astronomer, Warrior)

Correct Option - 3

Que. 111 **Direction:** Read the given statements and conclusions carefully. Assuming that the information given in the statements is true, even if it appears to be at variance with commonly known facts, decide which of the given conclusions logically follow(s) from the statements.

Statements:

Some donkeys are horse.

Some tiger are donkey.

Conclusions:

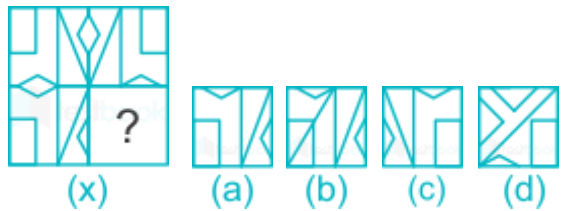
I. All donkeys is horse.

II. Some horse is not tiger.

1. Only Conclusion I follows
2. Only Conclusion II follows
3. None of the conclusion follows
4. Both conclusion I and II follows

Correct Option - 3

Que. 112 **DIRECTIONS:** In each of the following questions, complete the missing portion (?) of the given pattern by selecting from the given alternatives (a), (b), (c), and (d).



1. A
2. B
3. C
4. D

Correct Option - 3

Que. 113 **Directions:** Study the information carefully and answer the given questions.

Rehan participated in a marathon. He started at the starting line and started running towards the South, upon reaching 10 km, he made a left turn and ran another 6 km before taking another left turn. He then ran 8 km and turned towards his right. After running for 4 km, he turned left and reached the finish line after another 2 km. How far away is the finish line from the starting line? (All turns are 90° turns only.)

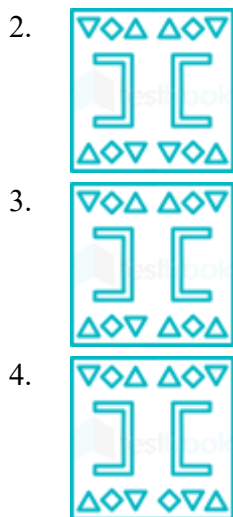
1. 4 km
2. 5 km
3. 10 km
4. 15 km

Correct Option - 3

Que. 114 A piece of paper is folded and punched as shown below in the question figures. From the given answer figures, indicate how it will appear when opened?



- 1.



Correct Option - 2

Que. 115 Select the option that is related to the fifth term in the same way as the second term is related to the first term and fourth term related to third term.

27 : 81 :: 18 : 36 :: 33 : ?

- 1. 121
- 2. 135
- 3. 125
- 4. 131

Correct Option - 1

Que. 116 Select the option in which the numbers share the same relationship in set as that shared by the numbers in the given set. (NOTE: Operations should be performed on the whole numbers, without breaking down the numbers into its constituent digits. E.g. 13 – Operations on 13 such as adding /subtracting /multiplying etc. to 13 can be performed. Breaking down 13 into 1 and 3 and then performing mathematical operations on 1 and 3 is not allowed)

(32, 39, 46)
(54, 51, 48)

- 1. (48, 30, 12)
- 2. (72, 44, 36)
- 3. (85, 45, 24)
- 4. (64, 43, 17)

Correct Option - 1

Que. 117 Four friends, Ankita, Shruti, Payal and Mahak, are sitting at a rectangular table, each at one corner. Ankita is sitting to the right of Shruti, who is sitting diagonally opposite to Payal. Where is Ankita sitting with respect to Mahak?

- 1. Directly opposite
- 2. Diagonally opposite

3. Immediate right
4. Immediate left

Correct Option - 2

Que. 118 Six persons M1, M2, M3, M4, M5 and M6 are sitting in a row facing towards north (not necessarily in the same order). Only three persons sit between M2 and M3. M3 is sitting to the immediate left of M5. Only three person sit between M1 and M5. M4 sits to the immediate left of M6 and is to the right of M3. How many persons are sitting between M3 and M6?

1. Zero
2. Three
3. One
4. Two

Correct Option - 4

Que. 119 A team of five members is sitting in a row facing towards the north. C is to the left of A and to the right of E. B is to the left of D and to the right of A. Who is sitting in the middle?

1. A
2. D
3. C
4. B

Correct Option - 1

Que. 120 Study the given information carefully and answer the question that follows.

Eight persons A, B, C, D, E, F, G and H are sitting in a row facing the north but not necessarily in the same order. Three persons are sitting between D and F. G is sitting to the immediate left of D. Only one person is sitting between E and B. E is not sitting at any of the extreme ends. More than three persons are sitting between H and A. A is sitting to the left of H. Either H or A is sitting at one of the ends. Neither D nor F is sitting at any of the extreme ends. E and B are not the immediate neighbours of G and D. E is sitting to the right of B.

How many persons are sitting between H and C?

1. Three
2. One
3. Two
4. None

Correct Option - 1