



Teachingninja.in



Latest Govt Job updates



Private Job updates



Free Mock tests available



Visit - teachingninja.in

**DSSSB
Junior Secretariat
Assistant**

Previous Year Paper
3 April 2022 Shift 3
(English)





GOVT. OF NCT OF DELHI
Delhi Subordinate Services Selection Board
FC-18, Institutional Area, Karkardooma, Delhi – 110092.
www.dsssb.delhigovt.nic.in

Participant ID	
Participant Name	
Test Center Name	
Test Date	03/04/2022
Test Time	4:30 PM - 6:30 PM
Subject	Junior Secretariat Assistant

Section : Mental Ability 1

Q.1 If 'M' means '+', 'H' means 'x', 'R' means '÷' and 'D' means '-', then which of the following will result in 141, if the signs of M and R are interchanged?

- Ans ☒ A. 66 H 18 M 9 R 13 D 26
☒ B. 26 R 66 H 18 M 13 D 9
☒ C. 26 M 13 H 66 R 18 D 9
☒ D. 18 H 26 M 13 R 9 D 66

Question ID : 63068049089

Q.2 Read the given statement and conclusions carefully. Select which conclusion(s) is/are true based on the given statement

Statement

$P = Q > R = S \geq T$

Conclusions

I) $P = S$

II) $P > T$

- Ans ☒ A. Both I and II are true
☒ B. Only I is true
☒ C. Only II is true
☒ D. Neither I nor II is true

Question ID : 63068051742

Q.3 Leo is the only brother of John. Ron is the husband of Victoria. Leo is the paternal uncle of Tony. Maddie is the wife of Leo. Nick is the nephew of John. Kate is the daughter-in-law of Victoria. Tony is the grandson of Ron. How is Nick related to Tony?

- Ans ☒ A. Nephew
☒ B. Cousin
☒ C. Uncle
☒ D. Brother-in-law

Question ID : 63068050859

Q.4 Select the option in which the letter-pairs share the same relationship as that shared by the letter-pairs in the given triad.

GS – EV – CY

- Ans ☒ A. HR – FS – CT
☒ B. XC – VF – TI
☒ C. KP – GR – CS
☒ D. TF – SE – PD

Question ID : 63068048686

Q.5 In a certain code language, IMAGE is written as RNZTV. How will OPTION be written in that language?

- Ans ☒ A. GKMLLR
☒ B. LKGRLM
☒ C. MLRGKL
☒ D. RLMLKG

Question ID : 63068050941

Q.6 Ramesh started from his house and walked 5 km towards the north. Then he turned to his left and walked 5 km. From there he took a right turn and walked 5 km. In which direction is he facing now?

- Ans ☒ A. East
☒ B. West
☒ C. North
☒ D. South

Question ID : 63068048841

Q.7 3 is related to 8 following a certain logic. Following the same logic, 15 is related to 22. To which of the following is 35 related, following the same logic?

- Ans ☒ A. 44
☒ B. 43
☒ C. 47
☒ D. 45

Question ID : 63068049486

Q.8 Select the option that is related to the third number in the same way as the second number is related to the first number and the sixth number is related to the fifth number.
168 : 42 :: 252 : ? :: 624 : 156

- Ans ☒ A. 89
☒ B. 63
☒ C. 57
☒ D. 77

Question ID : 63068048624

Q.9 Lakshmi walked 10 km from her house towards the west. From there she took a right turn and walked 5 km. Then she turned right again and walked 10 km. In which direction is she going?

- Ans ☒ A. South
☒ B. East
☒ C. West
☒ D. North

Question ID : 63068048854

Q.10 Select the option in which the letter-clusters share the same relationship as that shared by the given pair of letter-clusters.
MOQ : UWY

- Ans ☒ A. LNO : UWX
☒ B. TVW : FHI
☒ C. ACE : VXZ
☒ D. RTV : GIJ

Question ID : 63068048689

Q.11 A statement is given followed by two conclusions. Find which conclusion(s) is/are true based on the given statement.

Statement:

$$S > I = M > R = A > N$$

Conclusions:

I. $A < S$

II. $I > N$

- Ans ☒ A. Neither I nor II
☒ B. Only II
☒ C. Both I and II
☒ D. Only I

Question ID : 63068058646

Q.12 If '+' means '÷', '-' means 'x', '÷' means '+' and 'x' means '-', what will be the value of the following expression?
 $(6 - 5 \div 40) + 35 \times 2$

- Ans ☒ A. 35
☒ B. 0
☒ C. 1
☒ D. 15

Question ID : 63068048321

Q.13 In a certain code language,

'A + B' means 'A is the sister of B',
'A - B' means 'A is the father of B',
'A × B' means 'A is the mother of B',
'A ÷ B' means 'A is the daughter of B'.

Based on this information, how is H related to M if 'H × L - Q + R ÷ M'?

- Ans
- ☒ A. Son's daughter
 - ☒ B. Mother's mother
 - ☒ C. Husband's mother
 - ☒ D. Father's mother

Question ID : 63068048813

Q.14 This question is based on the following words.

LOCK READ LACK LAME

If 'C' is added before each word, how many new meaningful English words will be formed?

- Ans
- ☒ A. Three
 - ☒ B. One
 - ☒ C. Two
 - ☒ D. Four

Question ID : 63068049326

Q.15 Four letter-clusters have been given, out of which three are alike in some manner and one is different. Select the letter-cluster that is different.

- Ans
- ☒ A. IMKO
 - ☒ B. CHEJ
 - ☒ C. PURW
 - ☒ D. QVSX

Question ID : 63068050841

Q.16 Garima is the wife of Kanika's brother. Kanika is the daughter of Kishore, who is the husband of Sujata. Piyush is the son of Sujata's only son Aman. How is Aman related to Kishore?

- Ans
- ☒ A. Son
 - ☒ B. Son's son
 - ☒ C. Daughter's husband
 - ☒ D. Brother

Question ID : 63068050419

Q.17 L, N, O and P have different heights. L is shorter than N but taller than O. Only one person is shorter than P. O is the shortest. Who among them is tallest?

- Ans
- ☒ A. N
 - ☒ B. P
 - ☒ C. L
 - ☒ D. O

Question ID : 63068051690

Q.18 Four letter-clusters have been given, out of which three are alike in some manner and one is different. Select the letter-cluster that is different

- Ans ☒ A. MCR
☒ B. KNA
☒ C. UVY
☒ D. SQS

Question ID : 63068050839

Q.19 13.39 multiplied by 2.7 gives approximately:

- Ans ☒ A. 35
☒ B. 36
☒ C. 37
☒ D. 34

Question ID : 63068050374

Q.20 In a certain code language, 'don't break rules' is written as 'qr mt rh' and 'rules are mandatory' is written as 'np lk mt'. How will 'rules' be coded in the given language?

- Ans ☒ A. mt
☒ B. rh
☒ C. lk
☒ D. np

Question ID : 63068057798

Section : Mental Ability 2

Q.1 Select the option in which the triad share the same relationship as that shared by the given triad.
FH – DB – AC

- Ans ☒ A. VX – TR – QS
☒ B. XZ – VY – SV
☒ C. PR – NL – KI
☒ D. NP – LK – IJ

Question ID : 63068050143

Q.2 Select the number from among the given options that can replace the question mark (?) in the following series.
123, 120, 111, 84, ?

- Ans ☒ A. 8
☒ B. 5
☒ C. 3
☒ D. 4

Question ID : 63068050388

Q.3 Sixty-one women are sitting in a row facing north. Shalu sits fourth to the right of Manisha, who is twenty-seventh from the left. What is Shalu's position from the right?

Ans ☒ A. 31st

☒ B. 34th

☒ C. 27th

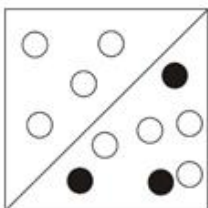
☒ D. 30th

Question ID : 63068058528


Q.4 Four figures have been given, out of which three are alike in some manner and one is different. Select the one that is different.

Ans


☒ A.




☒ B.



☒ C.

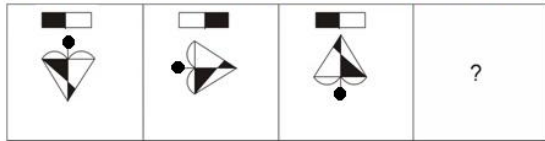


☒ D.



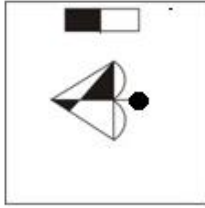
Question ID : 63068049702

Q.5 Select the figure from the options that can replace the question mark (?) and complete the pattern.

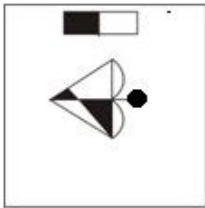


Ans

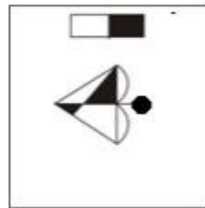
☒ A.



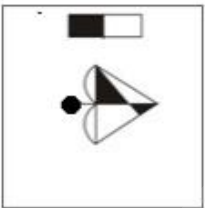
☒ B.



☒ C.



☒ D.



Question ID : 63068049689

Q.6 Read the given statements and conclusions carefully. Assuming that the information given in the statements is true, even if it appears to be at variance with commonly known facts, decide which of the given conclusions logically follow(s) from the statements.

Statements:

All passion fruits are custard apples.

Some custard apples are bananas.

Conclusions:

I. Some custard apples are passion fruits.

II. All bananas are custard apples.

Ans ☒ A. Neither conclusion I nor II follows

☒ B. Both the conclusions follow

☒ C. Only conclusion II follows

☒ D. Only conclusion I follows

Question ID : 63068056541

Q.7 Select the term that will come next in the following series.
CX65, FU33, IR17, LO9, OL5, ____

- Ans ☒ A. RJ5
☒ B. RI3
☒ C. RG3
☒ D. RK2

Question ID : 63068048581

Q.8 Select the figure from among the given options that can replace the question mark (?) in the following series.



Ans

- ☒ A.
- ☒ B.
- ☒ C.
- ☒ D.

Question ID : 63068056456

Q.9 Six boys Vansh, Ritik, Surya, Kapil, Pawan and Mihir are sitting on a straight bench facing the North. Kapil is sitting at the extreme right end. Pawan is sitting to the left of Surya and to the right of Mihir. Vansh is sitting to the right of Surya and to the left of Ritik. Who is sitting at the second position from the left end?

- Ans ☒ A. Mihir
☒ B. Pawan
☒ C. Vansh
☒ D. Ritik

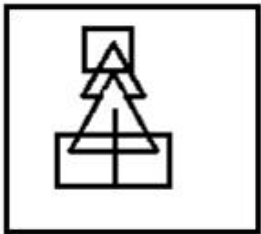
Question ID : 63068048890

Q.10 Select the option in which the given figure is embedded (rotation is NOT allowed).

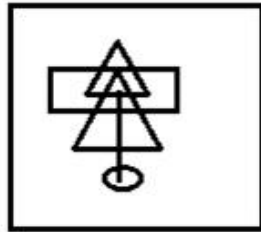


Ans

☒ A.



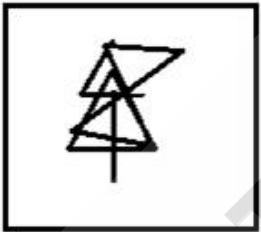
☒ B.



☒ C.



☒ D.



Question ID : 63068058072

Q.11 Select the alphanumeric-cluster from among the given options that can replace the question mark (?) in the following series.
3A11, 6D13, 12G15, 24J17, ?

Ans ☒ A. 48M19

☒ B. 46M21

☒ C. 50N19

☒ D. 46N21

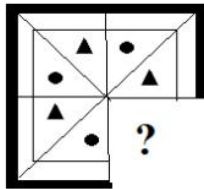
Question ID : 63068048371

Q.12 Four pairs of letter-clusters have been given, out of which three are alike in some manner and one is different. Select the one that is different.

- Ans
- ☒ A. JEQ : LCS
 - ☒ B. PUN : RSP
 - ☒ C. PLT : RJV
 - ☒ D. JHQ : KFS

Question ID : 63068050427

Q.13 Select the figure from the options that can replace the question mark (?) and complete the pattern.

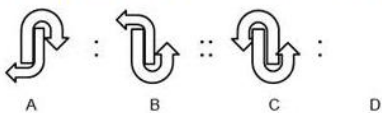


Ans

- ☒ A.
- ☒ B.
- ☒ C.
- ☒ D.

Question ID : 63068057210

Q.14 Select the option that is related to Figure C in the same way as Figure B is related to Figure A.



Ans

- ☒ A.
- ☒ B.
- ☒ C.
- ☒ D.

Question ID : 63068057848

Q.15 Select the alphanumeric-cluster from among the given options that can replace the question mark (?) in the following series.
5XY1M, 9ZA5N, 13BC9O, ?, 21FG17Q

- Ans
- ☒ A. 17DE13P
 - ☒ B. 15DE13P
 - ☒ C. 15ED15P
 - ☒ D. 17ED15P

Question ID : 63068048362

Q.16 A certain number of people are sitting in a row, facing North. R is to the immediate left of O. Z is fourth to the right of R. Only three people sit between G and R. Only three people sit between X and O. W is at the immediate right of Z. If no other person is sitting in the row, what is the total number of persons seated?

- Ans
- ☒ A. 10
 - ☒ B. 11
 - ☒ C. 9
 - ☒ D. 12

Question ID : 63068057380

Q.17 Select the number from among the given options that can replace the question mark (?) in the following series.
417, 407, 393, 375, ?

- Ans ☒ A. 359
☒ B. 353
☒ C. 351
☒ D. 355

Question ID : 63068050399

Q.18 Four letter-clusters have been given, out of which three are alike in some manner and one is different. Select the letter-cluster that is different.

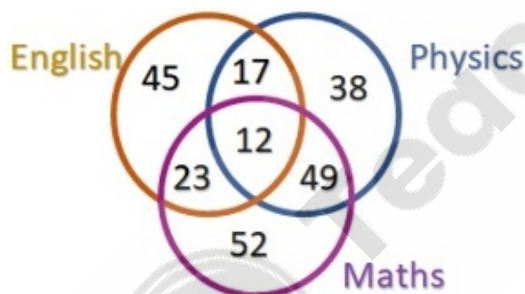
- Ans ☒ A. MQP
☒ B. JNM
☒ C. EIH
☒ D. UXW

Question ID : 63068048658

Comprehension:

Study the given diagram carefully and answer the questions that follow.

The numbers in the different sections indicate the number of people studying Physics, Maths and English in College A.



SubQuestion No : 19

Q.19 If A = the number of people studying only English, and B = the number of people studying both Physics and Maths but NOT English, then, $A + B =$ _____.

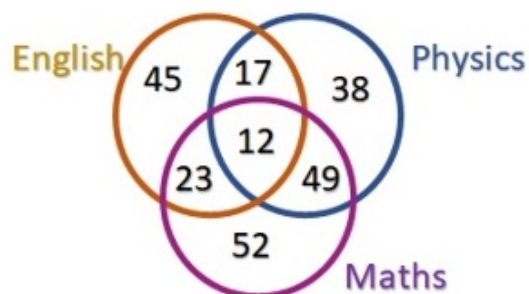
- Ans ☒ A. 112
☒ B. 97
☒ C. 106
☒ D. 94

Question ID : 63068063608

Comprehension:

Study the given diagram carefully and answer the questions that follow.

The numbers in the different sections indicate the number of people studying Physics, Maths and English in College A.



SubQuestion No : 20

Q.20 How many people study Maths in the given college?

- Ans
- ☒ A. 136
 - ☐ B. 132
 - ☐ C. 124
 - ☐ D. 141

Question ID : 63068063609

Section : General Awareness 1

Q.1 The Great Bath was excavated from which Harappan site?

- Ans
- ☐ A. Harappa
 - ☒ B. Mohenjo-daro
 - ☐ C. Rakhigarhi
 - ☐ D. Dholavira

Question ID : 63068061601

Q.2 Which of the following is an example of an organism that shows asymmetry?

- Ans
- ☐ A. Annelids
 - ☐ B. Arthropods
 - ☒ C. Sponges
 - ☐ D. Echinoderms

Question ID : 63068053702

Q.3 Which of the following is an inert gas?

- Ans ☒ A. Helium
☒ B. Carbon dioxide
☒ C. Oxygen
☒ D. Nitrogen

Question ID : 63068052860

Q.4 In which of the following years, Ravi Shastri was appointed head coach of the Indian cricket team?

- Ans ☒ A. 2017
☒ B. 2015
☒ C. 2016
☒ D. 2018

Question ID : 63068052558

Q.5 The Mohiniattam dance is associated with which of the following Indian states?

- Ans ☒ A. Tamil Nadu
☒ B. Kerala
☒ C. Maharashtra
☒ D. Assam

Question ID : 63068052263

Q.6 Which festival is celebrated at the end of the holy month of Ramzan?

- Ans ☒ A. Milad-un-Nabi
☒ B. Urs
☒ C. Eid-ul-Azha
☒ D. Eid-ul-Fitr

Question ID : 63068061626

Q.7 Which of the following pairs are Bharatanatyam dancers?

- Ans ☒ A. Shovana Narayan and Kumudini Lakhia
☒ B. Rukmani Devi Arundale and Padma Subrahmanyam
☒ C. Kelucharan Mohapatra and Deba Prasad Das
☒ D. Sunanda Nair and Smitha Rajan

Question ID : 63068059352

Q.8 Dosmoche is the famous festival associated mainly with which of the following States/Union Territories?

- Ans** ☒ A. Ladakh
☐ B. Assam
☐ C. Puducherry
☐ D. West Bengal

Question ID : 63068050072

Q.9 Which of the following is the heaviest metal?

- Ans** ☐ A. Gold
☐ B. Mercury
☒ C. Osmium
☐ D. Silver

Question ID : 63068052861

Q.10 Which of the following planets is called the yellow planet?

- Ans** ☐ A. Jupiter
☐ B. Earth
☐ C. Mars
☒ D. Venus

Question ID : 63068054291

Q.11 In March 2021, Nitin Gadkari, Minister of Micro, Small and Medium Enterprises inaugurated _____ mobile Udyam Express of MSME.

- Ans** ☐ A. nine
☐ B. five
☒ C. seven
☐ D. three

Question ID : 63068052570

Q.12 Name the smallest living cells in the biological world, whose size is only 0.1 micrometres.

- Ans** ☐ A. Caulerpa taxifolia
☐ B. Acetabularia
☐ C. Sporozoites
☒ D. Mycoplasmas

Question ID : 63068050964

Q.13 What type of rocks are formed when heat, pressure, and chemically reactive waters change pre-existing rocks?

- Ans
- ☐ A. Igneous rocks
 - ☐ B. Sedimentary rocks
 - ☒ C. Metamorphic rocks
 - ☐ D. Volcanoes rocks

Question ID : 63068054310

Q.14 What do you mean by carbonisation?

- Ans
- ☒ A. The slow process of conversion of organic matters into coal
 - ☐ B. Absence of air, high temperature and high pressure
 - ☐ C. Process of making polyethene
 - ☐ D. Process of separating the various constituents

Question ID : 63068053690

Q.15 Which Indian archer created a record of winning maximum gold medals for India after winning her third individual women's recurve gold in Archery World Cup 2021?

- Ans
- ☐ A. Ankita Bhakat
 - ☐ B. Komalika Bari
 - ☒ C. Deepika Kumari
 - ☐ D. Bombayla Devi Laishram

Question ID : 63068052599

Q.16 Which of the following a type of simple tissue that has long, narrow cells with thick and lignified cell walls?

- Ans
- ☐ A. Meristems
 - ☐ B. Collenchyma
 - ☐ C. Parenchyma
 - ☒ D. Sclerenchyma

Question ID : 63068059159

Q.17 Which of the following statements are correct?

- I.Venus is the second planet from the Sun.
- II.Venus is known as Earth's twin.
- III.Venus is the coldest planet of our solar system.

- Ans
- ☐ A. I and III
 - ☐ B. I, II and III
 - ☐ C. II and III
 - ☒ D. I and II

Question ID : 63068052802

Q.18 As per 'National Senior Records' issued by the Athletics Federation of India on 7th September 2021, who holds the 100 Metre Record under his name?

- Ans ☒ A. Amiya Kumar Mallick
☐ B. Sanjeet Singh
☐ C. Muhammad Anas
☐ D. Anil Kumar Prakash

Question ID : 63068059680

Q.19 If India's Gross Value Added at base prices is ₹170 lakh crore, taxes are ₹13 lakh crore and subsidies are ₹2 lakh crore, what is the estimated Gross Domestic Product at market prices?

- Ans ☐ A. ₹151 crore
☐ B. ₹185 lakh crore
☒ C. ₹181 lakh crore
☐ D. ₹153 lakh crore

Question ID : 63068048310

Q.20 Two slits in Young's double slit experiment have amplitudes in the ratio 3 : 1. What will be the ratio of the fringe widths of light waves?

- Ans ☐ A. 3 : 1
☐ B. 1 : 1
☒ C. 9 : 1
☐ D. 81 : 1

Question ID : 63068070093

Section : General Awareness 2

Q.1 The Treaty of Sugauli was signed between _____.

- Ans ☐ A. British India and Afghanistan
☒ B. British India and Nepal
☐ C. Lord Cornwallis and Tipu Sultan
☐ D. Maratha and Warren Hastings

Question ID : 63068053037

Q.2 Which of the following is a proceeding whereby the court enquires into the legality of the claim which a party asserts to a public office, and to oust him from its enjoyment if the claim is well not founded?

- Ans ☐ A. Habeas Corpus
☐ B. Mandamus
☒ C. Quo Warranto
☐ D. Certiorari

Question ID : 63068051125

Q.3 Which of the following states in India had the highest rate of population living below poverty line in the year 1973-74?

- Ans ☒ A. Odisha
☒ B. West Bengal
☒ C. Madhya Pradesh
☒ D. Bihar

Question ID : 63068068844

Q.4 The first battle of Panipat was won by which of the following Mughal emperors?

- Ans ☒ A. Jahangir
☒ B. Babur
☒ C. Humayun
☒ D. Akbar

Question ID : 63068052782

Q.5 Petrochemical industries are divided into the sub-groups: (i) polymers, (ii) synthetic fibres, (iii) elastomers and (iv) _____.

- Ans ☒ A. resin
☒ B. polyethylene
☒ C. paint and dye
☒ D. surfactant intermediate

Question ID : 63068052883

Q.6 Annie Besant was _____.

- Ans ☒ A. a Theosophist and Irish socialist
☒ B. a famous world traveller
☒ C. initially a society lady
☒ D. a follower of Sri Aurobindo

Question ID : 63068049748

Q.7 Temperature _____ as one goes higher on the Himalayas.

- Ans ☒ A. multiplies
☒ B. remains constant
☒ C. increases
☒ D. decreases

Question ID : 63068053093

Q.8 In which of the following places of India is Sanskrit still spoken?

- Ans ☒ A. Punsari
☒ B. Malana
☒ C. Mattur
☒ D. Madhapar

Question ID : 63068052894

Q.9 What is the minimum prescribed age to become a member of Rajya Sabha?

- Ans ☒ A. 35 years
☒ B. 25 years
☒ C. 21 years
☒ D. 30 years

Question ID : 63068051146

Q.10 Which of the following is the 'heart and soul' of the Constitution of India according to Dr. BR Ambedkar?

- Ans ☒ A. Article 32
☒ B. Article 15
☒ C. Preamble
☒ D. Article 17

Question ID : 63068052768

Q.11 The provisions of Directive Principles of State Policy are contained in ____ of the Constitution of India

- Ans ☒ A. Part IV
☒ B. Part IX
☒ C. Part III
☒ D. Part V

Question ID : 63068051498

Q.12 Which of the following states in India is also known as the 'Molasses basin'?

- Ans ☒ A. Arunachal Pradesh
☒ B. Mizoram
☒ C. Tripura
☒ D. Meghalaya

Question ID : 63068052867

Q.13 In how many verticals is the Khelo India Programme divided?

- Ans
- ☐ A. 18
 - ☐ B. 14
 - ☐ C. 16
 - ☒ D. 12

Question ID : 63068051179

Q.14 The oldest atomic power station in India is located at?

- Ans
- ☐ A. Kalpakkam
 - ☐ B. Kota
 - ☒ C. Tarapur
 - ☐ D. Narora

Question ID : 63068049565

Q.15 If consumers prefer the bundle that has more of at least one of the goods and no less of the other good as compared to the other bundle, then the consumer preferences are called:

- Ans
- ☐ A. diminishing
 - ☒ B. monotonic
 - ☐ C. increasing
 - ☐ D. substitutes

Question ID : 63068054962

Q.16 As compared to which of the following countries does India have lower population density?

- Ans
- ☐ A. China
 - ☒ B. Bangladesh
 - ☐ C. Indonesia
 - ☐ D. Pakistan

Question ID : 63068053113

Q.17 Identify the true statement.

- Ans
- ☒ A. Primary deficit = fiscal deficit – interest payment
 - ☐ B. Primary deficit = budget deficit + interest payment
 - ☐ C. Primary deficit = budget deficit – interest payment
 - ☐ D. Primary deficit = fiscal deficit + interest payment

Question ID : 63068068761

Q.18 Which State has the maximum strength in Vidhan Parishad?

- Ans
- ☐ A. Karnataka
 - ☐ B. Maharashtra
 - ☒ C. Uttar Pradesh
 - ☐ D. Andhra Pradesh

Question ID : 63068051537

Q.19 Which of the following was NOT included in dvija varnas of Vedic tradition?

- Ans ☒ A. Shudra
☐ B. Kshatriya
☐ C. Vaishya
☐ D. Brahmana

Question ID : 63068052282

Q.20 In which of the following languages were Ashokan inscriptions written?

- Ans ☐ A. Brahmi and Kharosthi
☒ B. Prakrit, Greek and Aramaic
☐ C. Sanskrit, Pali and Hindi
☐ D. Persian and Greek

Question ID : 63068049733

Section : Arithmetic Ability 1

Q.1 The base of a cylinder has an area of 10.24π and the cylinder has a height of 5. What is the curved surface area of this cylinder?

- Ans ☐ A. 16π
☐ B. 51.2π
☒ C. 32π
☐ D. 102.4π

Question ID : 63068058515

Q.2 A saree store declares a discount scheme as "Buy 1 saree and get 75% off on another saree of the same price". What is the profit percentage of the store, if each saree has cost price 75% below the marked price?

- Ans ☐ A. 100%
☐ B. 200%
☒ C. 150%
☐ D. 120%

Question ID : 63068058347

Q.3 The average marks of 23 children in a particular coaching class is 62. When a new student with 86 marks joins the class, what will be the new average of the class?

- Ans ☐ A. 62.5
☐ B. 62.56
☒ C. 63
☐ D. 62.875

Question ID : 63068060074

Q.4 The sum of the cubes of two numbers is 1755. The sum of the numbers is 15. The difference of the two numbers is:

- Ans ☒ A. 9
☒ B. 6
☒ C. 8
☒ D. 7

Question ID : 63068050006

Q.5 If $2^{n-1} + 2^{n+1} = 320$, then n is equal to:

- Ans ☒ A. 7
☒ B. 6
☒ C. 8
☒ D. 5

Question ID : 63068067835

Q.6 The cost price of an encyclopedia is Rs.10,080, which is 20% below its marked price. If the article is sold at a discount of 30%, what is its selling price (in Rs.)?

- Ans ☒ A. 7,500
☒ B. 10600
☒ C. 8,820
☒ D. 9,990

Question ID : 63068058341

Q.7 The strength of a school increased from 400 to 500. Find the percentage of increase.

- Ans ☒ A. 20%
☒ B. 25%
☒ C. 30%
☒ D. 15%

Question ID : 63068051610

Q.8 The length of the longest rod that can fit in a cubical vessel of side 30 cm is ____.

- Ans ☒ A. $10\sqrt{3}$ cm
☒ B. 30 cm
☒ C. $30\sqrt{3}$ cm
☒ D. 10 cm

Question ID : 63068056844

Q.9 The average of six numbers is x and the average of three of these numbers is y . If the average of the remaining three is z , then:

- Ans
- ☐ A. $z = x + y$
 - ☐ B. $z = x - y$
 - ☒ C. $z = 2x - y$
 - ☐ D. $2z = x - 2y$

Question ID : 63068051254

Q.10 The interest on a sum of ₹4,096 for 3 years, when interest is compounded annually at a certain rate of interest, is ₹817. Find the rate of interest per annum.

- Ans
- ☐ A. $6\frac{3}{8}\%$
 - ☒ B. $6\frac{1}{4}\%$
 - ☐ C. $6\frac{3}{4}\%$
 - ☐ D. $6\frac{1}{2}\%$

Question ID : 63068051390

Q.11 If $\left(\frac{3}{5}\right)^x \times \left(\frac{5}{3}\right)^{2x} = \frac{625}{81}$, then the value of x is:

- Ans
- ☐ A. 6
 - ☐ B. 4
 - ☐ C. 3
 - ☒ D. 9

Question ID : 63068067296

Q.12 Filling the ice-cream cone with a radius of 2 cm and a height of 7 cm to the brim will be used to distribute a cubical ice-cream brick with a 22-cm edge among some children. How many children will get the ice cream cones?

- Ans
- ☐ A. 421
 - ☐ B. 254
 - ☒ C. 363
 - ☐ D. 382

Question ID : 63068064884

Q.13 A rational number that equals to $2.\bar{6}$ is:

- Ans
- ☐ A. $\frac{3}{8}$
 - ☐ B. $\frac{13}{5}$
 - ☐ C. $\frac{5}{13}$
 - ☒ D. $\frac{8}{3}$

Question ID : 63068051226

Q.14 Find the HCF of $\frac{2}{5}$, $\frac{3}{5}$ and $\frac{1}{2}$.

- Ans
- ☐ A. 1
 - ☐ B. 10
 - ☐ C. $\frac{1}{20}$
 - ☒ D. $\frac{1}{10}$

Question ID : 63068055095

Q.15 A cuboid is formed by joining 3 cubes of diagonal $15\sqrt{3}$ cm. What is the volume the cuboid?

- Ans
- ☒ A. 10125 cm^3
 - ☐ B. 12751 cm^3
 - ☐ C. 30375 cm^3
 - ☐ D. 17212 cm^3

Question ID : 63068056838

Q.16 A car travels 20 m in 4 minutes, and later, 20 km at a speed of 80 km/h. Calculate its average speed.

- Ans
- ☐ A. 15.58 m/s
 - ☐ B. 15.02 m/s
 - ☒ C. 17.56 m/s
 - ☐ D. 16.24 m/s

Question ID : 63068052634

Q.17 $\frac{1}{\sqrt{18} - \sqrt{16}} = ?$

- Ans
- ☒ A. $\frac{1}{2}(3\sqrt{2} - 4)$
 - ☒ B. $3\sqrt{2} - 4$
 - ☒ C. $3\sqrt{2} + 4$
 - ☒ D. $\frac{1}{2}(3\sqrt{2} + 4)$

Question ID : 63068049985

Q.18 On a certain sum, the difference between compound interest and simple interest for 2 years at 10% per annum, compounded annually, is Rs.64. If the interest is reckoned half-yearly, then the difference between the two interests is:

- Ans
- ☒ A. Rs.99.24
 - ☒ B. Rs.96.25
 - ☒ C. Rs.95.25
 - ☒ D. Rs.98.50

Question ID : 63068057585

Q.19 If $x + \frac{1}{x} = 2$ then $x^{1017} + x^{-(1024)}$ is equal to:

- Ans
- ☒ A. 0
 - ☒ B. 4
 - ☒ C. 2
 - ☒ D. 1

Question ID : 63068058358

Q.20 A solid metallic sphere of radius 64 cm is melted and recast into spherical balls each of radius 4 cm. Find the number of spherical balls that can be obtained through this process.

- Ans
- ☒ A. 1024
 - ☒ B. 512
 - ☒ C. 4096
 - ☒ D. 2048

Question ID : 63068056814

Section : Arithmetic Ability 2

Q.1 A thief seeing a policeman from a distance of 200 metres starts running at a speed of 8 km/h. The policeman gives chase immediately with a speed of 9 km/h and the thief is caught. What is the distance run by the thief?

- Ans
- ☒ A. 1.4 km
 - ☒ B. 1.2 km
 - ☒ C. 1.6 km
 - ☒ D. 1.8 km

Question ID : 63068057599

Q.2 Find the value of y , if 9% of $y = 6.3$.

- Ans
- ☒ A. 70
 - ☒ B. 80
 - ☒ C. 65
 - ☒ D. 60

Question ID : 63068051627

Q.3 14 is the mean proportional of 49 and x . What is x ?

- Ans
- ☒ A. 6
 - ☒ B. 4
 - ☒ C. 3
 - ☒ D. 5

Question ID : 63068056864

Q.4 A shopkeeper gets a profit of 25% by selling an article at a 20% discount on its marked price. If the cost price of the article decreased by 25%, then how much per cent discount should he give now on the same marked price to get a profit of 50%?

- Ans
- ☒ A. 32%
 - ☒ B. 0.22
 - ☒ C. 0.28
 - ☒ D. 0.18

Question ID : 63068052664

Q.5 Raju's weight is 20% of Ramesh's and 25% of Rajesh's. What percentage of Rajesh's weight is equal to Ramesh's weight?

- Ans
- ☒ A. 115%
 - ☒ B. 125%
 - ☒ C. 130%
 - ☒ D. 120%

Question ID : 63068056861

Q.6 If the simple interest for 8 years is equal to 40% of the principal, after how many years will it be equal to the principal?

- Ans
- ☒ A. 18 years
 - ☒ B. 20 years
 - ☒ C. 10 years
 - ☒ D. 15 years

Question ID : 63068059554

Q.7 Certain goods are purchased for Rs.3,000. If one-fifth of the goods are sold at a profit of 5% and the remaining four-fifth of the goods at a profit of 10%, find the net profit percentage.

- Ans
- ☒ A. 9%
 - ☒ B. 7%
 - ☒ C. 8%
 - ☒ D. 6%

Question ID : 63068052654

Q.8 A, B and C can complete a piece of work in 14, 4 and 8 days, respectively. If they work together, how many days will they require to complete the same work?

- Ans
- ☒ A. 25 days
 - ☒ B. 15 days
 - ☒ C. 56 days
 - ☒ D. $\frac{56}{25}$ days

Question ID : 63068058219

Q.9 A train 150 m long passes a person, running at 9 km/h in the same direction in which the train is going in 30 seconds. The speed of the train is:

- Ans
- ☒ A. 32 km/h
 - ☒ B. 29 km/h
 - ☒ C. 24 km/h
 - ☒ D. 27 km/h

Question ID : 63068060096

Q.10 The cost of an item was ₹4,000. Tarun made a down payment of 20% of the same and the remaining balance after 5 months inclusive of the interest charged at 18% simple interest per annum. What was the interest that Tarun paid?

- Ans
- ☒ A. 250
 - ☒ B. 240
 - ☒ C. 225
 - ☒ D. 200

Question ID : 63068051380

Q.11 The angle between the minute hand and the hour hand of a clock when the time is 5 hours 20 minutes is:

- Ans ☒ A. 20°
☒ B. 10°
☒ C. 40°
☒ D. 30°

Question ID : 63068056899

Q.12 In an election between two candidates, the candidate getting 55% of the votes polled is elected by a majority of 15,500 votes. The number of votes polled by the losing candidate is:

- Ans ☒ A. 87625
☒ B. 69750
☒ C. 85250
☒ D. 67750

Question ID : 63068060077

Q.13 The ratio of the marks obtained by a student in five papers of an examination is 8 : 9 : 10 : 11 : 12 (total marks of each subject is the same). If the average marks scored is 70%, then in how many papers did the student score more than 80%?

- Ans ☒ A. 3
☒ B. 4
☒ C. 1
☒ D. 2

Question ID : 63068059931

Q.14 A and B together can complete a piece of work in 3 days. If A alone can complete the same work in 15 days, in how many days can B alone complete the work?

- Ans ☒ A. 3.25 days
☒ B. 3 days
☒ C. 3.75 days
☒ D. 4 days

Question ID : 63068058218

Q.15 Ram, Shyam and Madhu can do a work alone in 24 days, 30 days and 40 days, respectively. They started working simultaneously, but Madhu left midway and it took 4 more days to finish the work. How many days did all three work together?

- Ans ☒ A. 7
☒ B. 6
☒ C. 11
☒ D. 10

Question ID : 63068058231

Q.16 A contractor agreed to construct a road in 200 days. He had 140 men working for him. He discovered that only one-fourth of the road could be built after 60 days. How many more men need he hire in order to finish the job on time?

- Ans
- ☒ A. 60
 - ☒ B. 120
 - ☒ C. 40
 - ☒ D. 240

Question ID : 63068064849

Q.17 In an election, the candidate who secured 64% of the votes polled, won by 504 votes. What is the total number of voters on the voting list, if 90% voters cast their votes and there were no invalid votes?

- Ans
- ☒ A. 1,800
 - ☒ B. 2,400
 - ☒ C. 2,100
 - ☒ D. 2,000

Question ID : 63068058311

Q.18 Krishna bought a land for Rs.15,00,000 and sold one-third of the land at 20% profit and remaining two-third of the land at 25% profit. What percentage did he gain in total?

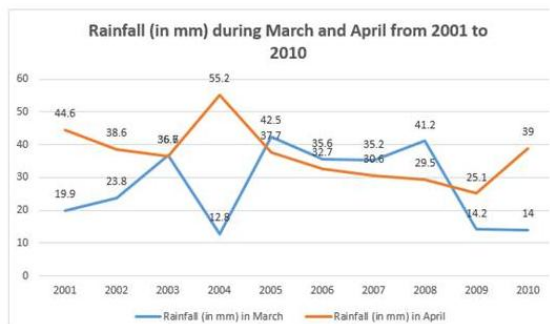
- Ans
- ☒ A. $23\frac{1}{3}\%$
 - ☒ B. $26\frac{1}{3}\%$
 - ☒ C. $24\frac{1}{3}\%$
 - ☒ D. $25\frac{1}{3}\%$

Question ID : 63068056846



Comprehension:

The given line graph shows the rainfall (in mm) in India during the months of March and April, between 2001 and 2010.



SubQuestion No : 19

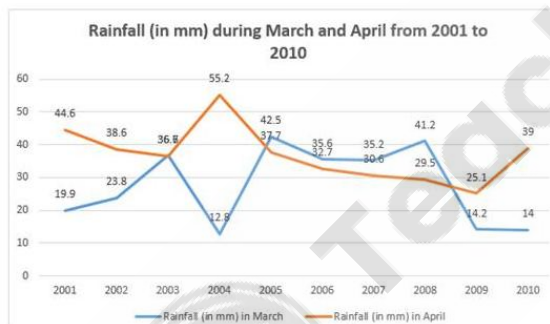
Q.19 In how many of these 10 years is the absolute difference between the amounts of rainfall in March and April in the same year less than 5 mm?

- Ans
- ☒ A. 3
 - ☒ B. 2
 - ☒ C. 4
 - ☒ D. 5

Question ID : 63068051415

Comprehension:

The given line graph shows the rainfall (in mm) in India during the months of March and April, between 2001 and 2010.



SubQuestion No : 20

Q.20 Among the 10 years for which data is given, in which year is the absolute difference between the amounts of rainfall in March and in April the maximum?

- Ans
- ☒ A. 2004
 - ☒ B. 2001
 - ☒ C. 2010
 - ☒ D. 2008

Question ID : 63068051414

Q.1 Select the option that correctly punctuates the given sentence.
The boys father was sitting on the bench.

- Ans ☒ A. The boy's father was sitting on the bench.
☐ B. The boys father, was sitting on the bench.
☐ C. The boys father was sitting on the bench!
☐ D. The boys father was sitting on the bench?

Question ID : 63068050288

Q.2 Select the most appropriate meaning of the given idiom.
Ask for the moon

- Ans ☐ A. To ask for everything
☒ B. To ask for too much
☐ C. To ask for very less
☐ D. To ask for nothing

Question ID : 63068054024

Q.3 Select the most appropriate option that can substitute the underlined word in the given sentence.
Some outsiders must have incited the mob to beat the thief to death.

- Ans ☐ A. Recovered
☐ B. Demolished
☐ C. Repaired
☒ D. Provoked

Question ID : 63068067196

Q.4 Select the most appropriate comparative degree to fill in the blank.
According to the weather forecast, today's weather will be _____ than that of yesterday.

- Ans ☐ A. windiest
☐ B. most windy
☒ C. windier
☐ D. more windy

Question ID : 63068054483

Q.5 Select the most appropriate option to fill in the blank.
I will always remember _____ day I met her.

- Ans ☐ A. few
☒ B. the
☐ C. an
☐ D. a

Question ID : 63068054757

Q.6 Select the most appropriate option to fill in the blank.
Her mother is _____ glad to see her daughter win the maximum number of prizes in the inter-school competitions.

- Ans ☒ A. much
☒ B. too
☒ C. very
☒ D. a lot

Question ID : 63068050169

Q.7 Select the most appropriate ANTONYM of the underlined word.
The lazy sons of the farmer refused to visit the village fair.

- Ans ☒ A. dejected
☒ B. industrious
☒ C. indolent
☒ D. miserable

Question ID : 63068060182

Q.8 Select the most appropriate adverb to fill in the blank.

The cricket ball hit Pataudi _____ in the eye.

- Ans ☒ A. rightly
☒ B. correctly
☒ C. right
☒ D. still

Question ID : 63068047994

Q.9 The following sentence has been split into four segments. Identify the segment that contains a grammatical error.
My mother is / taking a rest after / a big journey / to Hyderabad.

- Ans ☒ A. My mother is
☒ B. takinga rest after
☒ C. to Hyderabad
☒ D. a big journey

Question ID : 63068059309

Q.10 Select the most appropriate preposition to fill in the blank.

Every time I was about to sleep, my bedclothes would be pulled _____ the bed.

- Ans ☒ A. off
☒ B. between
☒ C. on
☒ D. across

Question ID : 63068047983

Q.11 Select the most appropriate option to fill in the blank.
There are ____ boys in engineering careers than girls.

- Ans ☒ A. most
☒ B. many more
☒ C. more
☒ D. many

Question ID : 63068057681

Q.12 The following sentence has been divided into parts. One of them may contain an error.
Select the part that contains the error from the given options. If you don't find any error,
select 'No error' as your answer.

(a) Ramesh wants to / (b) buy a new car / (c) by the end of this year. / (d) No error

- Ans ☒ A. c
☒ B. a
☒ C. d
☒ D. b

Question ID : 63068054774

Q.13 In the given sentence, four words have been underlined and the underlined words are given
as options. Select the option that contains an error.

The leader became frightened when his security guard pulled in a dagger and ran towards
him, with his colleague in tow.

- Ans ☒ A. in
☒ B. became
☒ C. with
☒ D. towards

Question ID : 63068047980

Q.14 Select the most appropriate option to fill in the blank and complete the given sentence.
It was very difficult to ____ attention to the board meeting after three hours!

- Ans ☒ A. It was very difficult to make attention to the board meeting after three hours!
☒ B. It was very difficult to have attention to the board meeting after three hours!
☒ C. It was very difficult to give attention to the board meeting after three hours!
☒ D. It was very difficult to pay attention to the board meeting after three hours!

Question ID : 63068050297

Q.15 Select the most appropriate option to fill in the blank.
Simran is ____ officer, but her husband owns ____ café.

- Ans ☒ A. an, a
☒ B. the, a
☒ C. a, a
☒ D. an, the

Question ID : 63068054772

Q.16 Select the most appropriate synonym of the underlined word.
Jack yelled with fear when he saw the snake in his room.

- Ans ☒ A. screamed
☒ B. squirmed
☒ C. confirmed
☒ D. proclaimed

Question ID : 63068054001

Q.17 Select the most appropriate meaning of the given proverb.

A journey of a thousand miles begins with a single step.

- Ans ☒ A. Every journey has its route.
☒ B. Howsoever big a task is, it starts with a small step.
☒ C. Though a journey is long, we have to prepare well.
☒ D. A thousand-mile journey must be undertaken with short rests.

Question ID : 63068049338

Q.18 Select the most appropriate version of the degree of comparison that can substitute the underlined word in the following sentence.
Shanky is strong than Saurabh.

- Ans ☒ A. the strong
☒ B. more strong
☒ C. stronger
☒ D. most strong

Question ID : 63068054053

Q.19 Identify the option that rearranges the given jumbled words and correctly fills in the blank.
A short story, a brief _____ a few characters.
prose / only / narrative / deals with / fictional

- Ans ☒ A. only fictional prose narrative deals with
☒ B. fictional prose narrative deals with only
☒ C. fictional prose only narrative deals with
☒ D. narrative prose only fictional deals with

Question ID : 63068050722

Q.20 Identify the erroneous use of punctuation mark in the following sentence.

"The only emperor," write's Wallace Stevens, "is the emperor of ice cream."

A B C D

- Ans ☒ A. A
☒ B. D
☒ C. C
☒ D. B

Question ID : 63068069775

Section : General English 2

Q.1 Parts of a sentence are given below in jumbled order. Arrange the parts in the right order to form a meaningful sentence .

- (P) against the guard
- (Q) a reason for the accusation
- (R) there should have been
- (S) who was on-duty at that time in Worli Apartments

Ans ☒ A. SPRQ
☒ B. RQPS
☒ C. PQRS
☒ D. RPSQ

Question ID : 63068055168

Q.2 Parts of a sentence are given below in jumbled order. Arrange the parts in the right order to form a meaningful sentence.

- (P) most of our cars
- (Q) are being manufactured by Tata and Hero
- (R) and the scooters
- (S) hybrid variants of

Ans ☒ A. SPQR
☒ B. SPRQ
☒ C. QPRS
☒ D. QRSP

Question ID : 63068055167

Q.3 Select the grammatically correct form of the given sentence from the following options.
Online education will have allow us to concentrate on our studies and excel during difficult times also.

Ans ☒ A. Online education will be allowing us to concentrate on our studies and exceling during difficult times also.
☒ B. Online education will have been allowing us to concentrate on our studies and exceling during difficult times also.
☒ C. Online education will have allowed us to concentrate on our studies and exceling during difficult times also.
☒ D. Online education will allow us to concentrate on our studies and excel during difficult times also.

Question ID : 63068055942

Q.4 Parts of a sentence are given in jumbled order. Arrange the parts in the correct order to form a meaningful sentence.

- A. As passive and captive elements who do not have a view
- B. The international convention of child rights
- C. Of their own, but it also violates
- D. Not only does this order treat children

Ans ☒ A. DACB
☒ B. ADCB
☒ C. ABCD
☒ D. DBAC

Question ID : 63068057698

Q.5 Select the most appropriate option that can substitute the underlined segment in the given sentence.

The police found some valuable evidence of the crime at the site, don't they?

- Ans
- ☒ A. doesn't they?
 - ☒ B. didn't they?
 - ☒ C. isn't it?
 - ☒ D. had they?

Question ID : 63068048016

Q.6 Parts of a sentence are given below in jumbled order. Arrange the parts in the correct order to form a meaningful sentence.

- A.the body, rendering the drinker less fit
- B.likely to be injurious to all parts of
- C.the excessive use of intoxicants is
- D.to do his share of work as a worker and citizen

- Ans
- ☒ A. ACDB
 - ☒ B. CABD
 - ☒ C. CBAD
 - ☒ D. ABCD

Question ID : 63068053985

Q.7 Select the option that expresses the given sentence in past continuous tense form.
We will be eating dinner, discussing our plans and having a good time.

- Ans
- ☒ A. We were eating dinner, discussing our plans and having a good time.
 - ☒ B. We have been eating, discussing our plans and a good time.
 - ☒ C. We are eating, discussing our plans and had a good time.
 - ☒ D. We were eating, discussed our plans and had a good time.

Question ID : 63068054744

Q.8 Select the most appropriate option to fill in the blank.
_____ is referred to as a system of government, where God is considered to be the supreme ruler or authority.

- Ans
- ☒ A. Democracy
 - ☒ B. Theocracy
 - ☒ C. Autocracy
 - ☒ D. Bureaucracy

Question ID : 63068050751

Q.9 Select the INCORRECTLY spelt word.

Nutrients, especially vitamins, are essential for maintainance of our body.

- Ans
- ☒ A. nutrients
 - ☒ B. essential
 - ☒ C. especially
 - ☒ D. maintainance

Question ID : 63068055157

Q.10 Select the option that expresses the following sentence in present continuous tense.
Was she not painting anymore?

- Ans ☒ A. Does she not painting anymore?
☒ B. Is she not painting anymore?
☒ C. Are she not painting anymore?
☒ D. Does she not paints anymore?

Question ID : 63068057661

Comprehension:

Read the given passage and answer the questions that follow.

Weather refers to atmospheric conditions that occur locally over short periods of time— from minutes to hours or days. Familiar examples include rain, snow, clouds, winds, floods, or thunderstorms. Climate, on the other hand, refers to the long-term regional or even global average of temperature, humidity and rainfall patterns over seasons, years, or decades.

Climate change is a long-term change in the average weather patterns that have come to define Earth's local, regional, and global climates. These changes have a broad range of observed effects that are synonymous with the term.

Changes observed in Earth's climate since the early 20th century are primarily driven by human activities, particularly, fossil fuel burning, which increases heat-trapping greenhouse gas levels in Earth's atmosphere, raising Earth's average surface temperature. These human-produced temperature increases are commonly referred to as global warming. Natural processes can also contribute to climate change, including internal variability (e.g., cyclical ocean patterns like El Niño, La Niña and the Pacific Decadal Oscillation) and external forces (e.g., volcanic activity, changes in the Sun's energy output, and variations in Earth's orbit).

Scientists use observations from the ground, air, and space, along with theoretical models, to monitor and study past, present and future climate change. Climate data records provide evidence of climate change key indicators; such as increase in global land and ocean temperature, rising sea levels, ice loss at Earth's poles and in mountain glaciers, frequent and severe changes in extreme weather; such as hurricanes, heat waves, wildfires, droughts, floods and precipitation, and cloud and vegetation cover changes, to name but a few.

SubQuestion No : 11

Q.11 According to the passage, which of the following can be best described as the key indicators of climate change?

- Ans ☒ A. Internal variability and external forces.
☒ B. Long-term change in the average weather patterns, local, regional, and global climatic changes, and broad range of observed effects.
☒ C. Fossil fuel burning and greenhouse gas emissions.
☒ D. Global warming, ice loss, frequent and severe changes in extreme weather and cloud and vegetation cover changes.

Question ID : 63068072209

Comprehension:

Read the given passage and answer the questions that follow.

Weather refers to atmospheric conditions that occur locally over short periods of time— from minutes to hours or days. Familiar examples include rain, snow, clouds, winds, floods, or thunderstorms. Climate, on the other hand, refers to the long-term regional or even global average of temperature, humidity and rainfall patterns over seasons, years, or decades.

Climate change is a long-term change in the average weather patterns that have come to define Earth's local, regional, and global climates. These changes have a broad range of observed effects that are synonymous with the term.

Changes observed in Earth's climate since the early 20th century are primarily driven by human activities, particularly, fossil fuel burning, which increases heat-trapping greenhouse gas levels in Earth's atmosphere, raising Earth's average surface temperature. These human-produced temperature increases are commonly referred to as global warming. Natural processes can also contribute to climate change, including internal variability (e.g., cyclical ocean patterns like El Niño, La Niña and the Pacific Decadal Oscillation) and external forces (e.g., volcanic activity, changes in the Sun's energy output, and variations in Earth's orbit). Scientists use observations from the ground, air, and space, along with theoretical models, to monitor and study past, present and future climate change. Climate data records provide evidence of climate change key indicators; such as increase in global land and ocean temperature, rising sea levels, ice loss at Earth's poles and in mountain glaciers, frequent and severe changes in extreme weather; such as hurricanes, heat waves, wildfires, droughts, floods and precipitation, and cloud and vegetation cover changes, to name but a few.

SubQuestion No : 12

Q.12 Which of the following best states the central idea of the passage?

- Ans
- ☒ A. Greenhouse effect
 - ☒ B. Global warming
 - ☒ C. Climate change
 - ☒ D. Cyclical ocean patterns

Question ID : 63068072210

Comprehension:

Read the given passage and answer the questions that follow.

Weather refers to atmospheric conditions that occur locally over short periods of time— from minutes to hours or days. Familiar examples include rain, snow, clouds, winds, floods, or thunderstorms. Climate, on the other hand, refers to the long-term regional or even global average of temperature, humidity and rainfall patterns over seasons, years, or decades.

Climate change is a long-term change in the average weather patterns that have come to define Earth's local, regional, and global climates. These changes have a broad range of observed effects that are synonymous with the term.

Changes observed in Earth's climate since the early 20th century are primarily driven by human activities, particularly, fossil fuel burning, which increases heat-trapping greenhouse gas levels in Earth's atmosphere, raising Earth's average surface temperature. These human-produced temperature increases are commonly referred to as global warming. Natural processes can also contribute to climate change, including internal variability (e.g., cyclical ocean patterns like El Niño, La Niña and the Pacific Decadal Oscillation) and external forces (e.g., volcanic activity, changes in the Sun's energy output, and variations in Earth's orbit).

Scientists use observations from the ground, air, and space, along with theoretical models, to monitor and study past, present and future climate change. Climate data records provide evidence of climate change key indicators; such as increase in global land and ocean temperature, rising sea levels, ice loss at Earth's poles and in mountain glaciers, frequent and severe changes in extreme weather; such as hurricanes, heat waves, wildfires, droughts, floods and precipitation, and cloud and vegetation cover changes, to name but a few.

SubQuestion No : 13

Q.13 Which of the following represents the structure of the passage?

- Ans
- ☒ A. Comparison and contrast
 - ☒ B. Investigative
 - ☒ C. Inductive
 - ☒ D. Cause and effect

Question ID : 63068072207

Comprehension:

Read the given passage and answer the questions that follow.

Weather refers to atmospheric conditions that occur locally over short periods of time— from minutes to hours or days. Familiar examples include rain, snow, clouds, winds, floods, or thunderstorms. Climate, on the other hand, refers to the long-term regional or even global average of temperature, humidity and rainfall patterns over seasons, years, or decades.

Climate change is a long-term change in the average weather patterns that have come to define Earth's local, regional, and global climates. These changes have a broad range of observed effects that are synonymous with the term.

Changes observed in Earth's climate since the early 20th century are primarily driven by human activities, particularly, fossil fuel burning, which increases heat-trapping greenhouse gas levels in Earth's atmosphere, raising Earth's average surface temperature. These human-produced temperature increases are commonly referred to as global warming. Natural processes can also contribute to climate change, including internal variability (e.g., cyclical ocean patterns like El Niño, La Niña and the Pacific Decadal Oscillation) and external forces (e.g., volcanic activity, changes in the Sun's energy output, and variations in Earth's orbit).

Scientists use observations from the ground, air, and space, along with theoretical models, to monitor and study past, present and future climate change. Climate data records provide evidence of climate change key indicators; such as increase in global land and ocean temperature, rising sea levels, ice loss at Earth's poles and in mountain glaciers, frequent and severe changes in extreme weather; such as hurricanes, heat waves, wildfires, droughts, floods and precipitation, and cloud and vegetation cover changes, to name but a few.

SubQuestion No : 14

Q.14 According to the passage, which of the following is the first and foremost factor that has caused Earth's climate change since the early 20th century?

- Ans
- ☐ A. Weather change
 - ☐ B. Natural processes
 - ☒ C. Human activities
 - ☐ D. Global warming

Question ID : 63068072211

Comprehension:

Read the given passage and answer the questions that follow.

Weather refers to atmospheric conditions that occur locally over short periods of time— from minutes to hours or days. Familiar examples include rain, snow, clouds, winds, floods, or thunderstorms. Climate, on the other hand, refers to the long-term regional or even global average of temperature, humidity and rainfall patterns over seasons, years, or decades.

Climate change is a long-term change in the average weather patterns that have come to define Earth's local, regional, and global climates. These changes have a broad range of observed effects that are synonymous with the term.

Changes observed in Earth's climate since the early 20th century are primarily driven by human activities, particularly, fossil fuel burning, which increases heat-trapping greenhouse gas levels in Earth's atmosphere, raising Earth's average surface temperature. These human-produced temperature increases are commonly referred to as global warming. Natural processes can also contribute to climate change, including internal variability (e.g., cyclical ocean patterns like El Niño, La Niña and the Pacific Decadal Oscillation) and external forces (e.g., volcanic activity, changes in the Sun's energy output, and variations in Earth's orbit).

Scientists use observations from the ground, air, and space, along with theoretical models, to monitor and study past, present and future climate change. Climate data records provide evidence of climate change key indicators; such as increase in global land and ocean temperature, rising sea levels, ice loss at Earth's poles and in mountain glaciers, frequent and severe changes in extreme weather; such as hurricanes, heat waves, wildfires, droughts, floods and precipitation, and cloud and vegetation cover changes, to name but a few.

SubQuestion No : 15

Q.15 Which is the best description of the tone of the passage?

- Ans
- ☐ A. Ethical
 - ☐ B. Incendiary
 - ☐ C. Technical
 - ☒ D. Humanistic

Question ID : 63068072208

Comprehension:

Read the given passage and answer the questions that follow.

For centuries, humanity has turned to prayer when all efforts have been exhausted. Regardless of the language, tradition or culture in which it is offered, prayer is a realisation that there is a higher power that can do more than we can.

Whether we pray for ourselves or ask for something on behalf of another, prayers often focus on achieving material gains of this physical world. This is because the physical world is what we know. So, what is it that we should pray for? As human beings, our knowledge of our lives and the world around us is limited. God, however, knows our past, present and future, and, as such, knows what is best for us. Our prayer to God should simply be for God's will, not our will, to play out in our lives.

What is the right technique for praying to God? There is a part of God that is already inside us, and prayer then becomes a communication with a divine power that resides within. God hears our prayers no matter what language in which they are uttered. What is important is the sincerity with which they are offered. When we come to God with humility, and when we surrender to God's will, we can be sure that peace, love, joy and harmony will prevail.

Prayer is a conversation where we talk to God. By contrast, meditation is a conversation where we listen to God and open up for God's grace in our lives. As we learn the technique of meditation, we learn the means to communicate with God in the right manner, such that we become recipients of the unbounded grace that is being showered in our direction.

SubQuestion No : 16

Q.16 Identify the most suitable word from the passage which means the same as 'to live'.

- Ans ☒ A. Humiliate
☒ B. harmonize
☒ C. Reside
☒ D. Prevail

Question ID : 63068071364

Comprehension:

Read the given passage and answer the questions that follow.

For centuries, humanity has turned to prayer when all efforts have been exhausted. Regardless of the language, tradition or culture in which it is offered, prayer is a realisation that there is a higher power that can do more than we can.

Whether we pray for ourselves or ask for something on behalf of another, prayers often focus on achieving material gains of this physical world. This is because the physical world is what we know. So, what is it that we should pray for? As human beings, our knowledge of our lives and the world around us is limited. God, however, knows our past, present and future, and, as such, knows what is best for us. Our prayer to God should simply be for God's will, not our will, to play out in our lives.

What is the right technique for praying to God? There is a part of God that is already inside us, and prayer then becomes a communication with a divine power that resides within. God hears our prayers no matter what language in which they are uttered. What is important is the sincerity with which they are offered. When we come to God with humility, and when we surrender to God's will, we can be sure that peace, love, joy and harmony will prevail.

Prayer is a conversation where we talk to God. By contrast, meditation is a conversation where we listen to God and open up for God's grace in our lives. As we learn the technique of meditation, we learn the means to communicate with God in the right manner, such that we become recipients of the unbounded grace that is being showered in our direction.

SubQuestion No : 17

Q.17 Which of the following is the most suitable title for the passage?

- Ans ☒ A. God's Will
☒ B. Technique of Meditation
☒ C. Higher Power
☒ D. Pray the Right Way

Question ID : 63068071366

Comprehension:

Read the given passage and answer the questions that follow.

For centuries, humanity has turned to prayer when all efforts have been exhausted.

Regardless of the language, tradition or culture in which it is offered, prayer is a realisation that there is a higher power that can do more than we can.

Whether we pray for ourselves or ask for something on behalf of another, prayers often focus on achieving material gains of this physical world. This is because the physical world is what we know. So, what is it that we should pray for? As human beings, our knowledge of our lives and the world around us is limited. God, however, knows our past, present and future, and, as such, knows what is best for us. Our prayer to God should simply be for God's will, not our will, to play out in our lives.

What is the right technique for praying to God? There is a part of God that is already inside us, and prayer then becomes a communication with a divine power that resides within. God hears our prayers no matter what language in which they are uttered. What is important is the sincerity with which they are offered. When we come to God with humility, and when we surrender to God's will, we can be sure that peace, love, joy and harmony will prevail.

Prayer is a conversation where we talk to God. By contrast, meditation is a conversation where we listen to God and open up for God's grace in our lives. As we learn the technique of meditation, we learn the means to communicate with God in the right manner, such that we become recipients of the unbounded grace that is being showered in our direction.

SubQuestion No : 18

Q.18 What is important while offering prayers to God?

- Ans ☒ A. The sincerity with which we offer prayers.
- ☐ B. The language in which we offer prayers.
- ☐ C. The knowledge of proper and correct prayers.
- ☐ D. The tradition of offering prayers.

Question ID : 63068071368

Comprehension:

Read the given passage and answer the questions that follow.

For centuries, humanity has turned to prayer when all efforts have been exhausted.

Regardless of the language, tradition or culture in which it is offered, prayer is a realisation that there is a higher power that can do more than we can.

Whether we pray for ourselves or ask for something on behalf of another, prayers often focus on achieving material gains of this physical world. This is because the physical world is what we know. So, what is it that we should pray for? As human beings, our knowledge of our lives and the world around us is limited. God, however, knows our past, present and future, and, as such, knows what is best for us. Our prayer to God should simply be for God's will, not our will, to play out in our lives.

What is the right technique for praying to God? There is a part of God that is already inside us, and prayer then becomes a communication with a divine power that resides within. God hears our prayers no matter what language in which they are uttered. What is important is the sincerity with which they are offered. When we come to God with humility, and when we surrender to God's will, we can be sure that peace, love, joy and harmony will prevail.

Prayer is a conversation where we talk to God. By contrast, meditation is a conversation where we listen to God and open up for God's grace in our lives. As we learn the technique of meditation, we learn the means to communicate with God in the right manner, such that we become recipients of the unbounded grace that is being showered in our direction.

SubQuestion No : 19

Q.19 Which of the following statements is INCORRECT according to the given passage?

- Ans ☒ A. We pray for ourselves as well as on behalf of others.
- ☐ B. Meditation is a conversation where we listen to God.
- ☐ C. Prayer is a realisation that there is a higher power.
- ☐ D. Prayer is a conversation where we listen to God.

Question ID : 63068071367

Comprehension:

Read the given passage and answer the questions that follow.

For centuries, humanity has turned to prayer when all efforts have been exhausted.

Regardless of the language, tradition or culture in which it is offered, prayer is a realisation that there is a higher power that can do more than we can.

Whether we pray for ourselves or ask for something on behalf of another, prayers often focus on achieving material gains of this physical world. This is because the physical world is what we know. So, what is it that we should pray for? As human beings, our knowledge of our lives and the world around us is limited. God, however, knows our past, present and future, and, as such, knows what is best for us. Our prayer to God should simply be for God's will, not our will, to play out in our lives.

What is the right technique for praying to God? There is a part of God that is already inside us, and prayer then becomes a communication with a divine power that resides within. God hears our prayers no matter what language in which they are uttered. What is important is the sincerity with which they are offered. When we come to God with humility, and when we surrender to God's will, we can be sure that peace, love, joy and harmony will prevail.

Prayer is a conversation where we talk to God. By contrast, meditation is a conversation where we listen to God and open up for God's grace in our lives. As we learn the technique of meditation, we learn the means to communicate with God in the right manner, such that we become recipients of the unbounded grace that is being showered in our direction.

SubQuestion No : 20

Q.20 Select the most appropriate **ANTONYM** of the given word.
Recipient

- Ans
- ☒ A. Receiver
 - ☒ B. Beneficiary
 - ☒ C. Donor
 - ☒ D. Giftee

Question ID : 63068071365

Section : General Hindi 1

Q.1 'परीक्षा देकर छात्र चले गए।' वाक्य का सर्वाधिक उपयुक्त मिश्र वाक्य है-

- Ans
- ☒ A. जब छात्रों ने परीक्षा दे दी तब वे चले गए।
 - ☒ B. छात्रों द्वारा परीक्षा देने पर वे चले गए।
 - ☒ C. छात्र परीक्षा देकर चले गए।
 - ☒ D. छात्रों ने परीक्षा दी और चले गए।

Question ID : 63068055699

Q.2 सभी पुत्रों की बहुएँ घर आ गईं।
रेखांकित बहुएँ शब्द का एकवचन रूप है

- Ans
- ☒ A. वधु
 - ☒ B. बहू
 - ☒ C. वधू
 - ☒ D. बहु

Question ID : 63068055268

Q.3 हस्ताक्षर शब्द को बहुवचन रूप में परिवर्तित करें

- Ans ☒ A. हस्ताक्षरीकरण
☒ B. हस्ताक्षरों
☒ C. हस्ताक्षर
☒ D. हस्ताक्षरित

Question ID : 63068049288

Q.4 (सुभाष बाबू ने कहा था तुम मुझे खून दो मैं तुम्हें आज़ादी दूंगा) - वाक्य में उचित विराम चिन्ह लगाकर बना सर्वाधिक उपयुक्त वाक्य है-

- Ans ☒ A. सुभाष बाबू ने कहा था , " तुम मुझे खून दो , मैं तुम्हें आज़ादी दूंगा "।
☒ B. सुभाष बाबू ने कहा था , ' तुम मुझे खून दो - मैं तुम्हें आज़ादी दूंगा।'।
☒ C. सुभाष बाबू ने कहा था - " तुम मुझे खून दो , मैं तुम्हें आज़ादी दूंगा।"
☒ D. सुभाष बाबू ने कहा था - 'तुम मुझे खून दो ; मैं तुम्हें आज़ादी दूंगा '।

Question ID : 63068055661

Q.5 तीन में न तेरह में का अर्थ क्या होता है ?

- Ans ☒ A. ठीक न्याय हो जाना
☒ B. थकने पर विश्राम चाहिए
☒ C. अभी सफलता में देरी है
☒ D. कुछ भी महत्व नहीं है

Question ID : 63068052025

Q.6 जीर्ण का तद्भव शब्द है।

- Ans ☒ A. जीरन
☒ B. झीना
☒ C. जीवन
☒ D. महिन

Question ID : 63068055807

Q.7 इस किताब के रचयिता कौन है? रेखांकित पद का लिंग बदलकर वाक्य को फिर से लिखिए।

- Ans ☒ A. इस किताब के रचत्री कौन है ?
☒ B. इस किताब के रचेता कौन है ?
☒ C. इस किताब के रचनाकारी कौन है ?
☒ D. इस किताब की रचयित्री कौन है ?

Question ID : 63068051929

Q.8 निम्न में से किस वाक्य में अल्प विराम के प्रयोग में अशुद्धि है--

- Ans ☒ A. घनश्याम, फिर भी तू सबकी इच्छा पूरी करता है।
☒ B. हम उन्हें सुख देंगे, क्योंकि उन्होंने हमारे लिए दुःख सहा है।
☒ C. बड़े महात्माओं ने समय, समय पर यह उपदेश दिया है।
☒ D. ब्रह्मा ने दुख और सुख, पाप और पुण्य, दिन और रात , ये सब बनाए हैं।

Question ID : 63068056281

Q.9 प्रत्युत्पन्नमति शब्द में कौन सा उपसर्ग है?

- Ans ☒ A. प्रत्यु
☒ B. प्रतिउत्
☒ C. प्र
☒ D. प्रति

Question ID : 63068060615

Q.10 निम्न में से शुद्ध वाक्य की पहचान करें-

- Ans ☒ A. निश्चित समय लगेगा इस कार्य को पूर्ण होने में एक
☒ B. निश्चित समय लगेगा पूर्ण होने में इस कार्य को एक
☒ C. इस कार्य को पूर्ण होने में एक निश्चित समय लगेगा
☒ D. इस कार्य को एक निश्चित समय लगेगा पूर्ण होने में

Question ID : 63068049312

Q.11 निम्नलिखित में से किस वाक्य में विदेशज शब्द रेखांकित नहीं है?

- Ans ☒ A. भारतीय लोग इलायची खाना पसंद करते हैं।
☒ B. भारतीय लोग चाय के शौकीन होते हैं।
☒ C. भारत से मलेरिया अब खत्म होने वाला है।
☒ D. भारत में अनेक रिक्शा चालक हैं।

Question ID : 63068055773

Q.12 निम्न में से शुद्ध वाक्य की पहचान करें-

- Ans ☒ A. गुड़ डालो जितना उतना मीठा होगा
☒ B. उतना मीठा होगा जितना गुड़ डालो
☒ C. गुड़ डालो उतना जितना मीठा होगा
☒ D. जितना गुड़ डालो उतना मीठा होगा

Question ID : 63068049317

Q.13 'जहाँ पहुँचा न जा सके' वाक्य के लिए सार्थक शब्द होना चाहिए-

- Ans ☒ A. दुर्गम
☒ B. कठिन
☒ C. वाचाल
☒ D. अगम्य

Question ID : 63068049756

Q.14 'ऊँची दुकान फीके पकवान' लोकोक्ति का उपयुक्त अर्थ है-

- Ans
- ☒ A. अनुभव की कमी होना
 - ☒ B. जरा भी अच्छा न लगाना
 - ☒ C. केवल बाह्य प्रदर्शन
 - ☒ D. बड़ा कार्य करना

Question ID : 63068052112

Q.15 निम्न में से विशेषण से सम्बंधित अशुद्ध वाक्य की पहचान करें?

- Ans
- ☒ A. मुझे वैसा आदमी मत समझो
 - ☒ B. मैं ऐसे-वैसे लोगों से दोस्ती नहीं करता
 - ☒ C. वह आदमी मेरे घर आया है
 - ☒ D. मेरी गाड़ी ऐसी नहीं है जैसी आपकी कार है

Question ID : 63068055873

Q.16 निम्नलिखित वाक्य के संदिग्ध भूतकाल में परिवर्तित रूप का चयन विकल्पों में से कीजिए-
तुमने लिखा था।

- Ans
- ☒ A. तुमने लिखा है।
 - ☒ B. तुमने लिख रहे हो।
 - ☒ C. तुम लिख रहे थे।
 - ☒ D. तुमने लिखा होगा।

Question ID : 63068055575

Q.17 कौन - से वाक्य में उत्तम पुरुष सर्वनाम का सही प्रयोग हुआ है ?

- Ans
- ☒ A. तुम्हें यह काम करना होगा।
 - ☒ B. वे दरवाजे के पास खड़े हैं।
 - ☒ C. हम कल मेला घूमने जाएँगे
 - ☒ D. क्या आप हमारे साथ मंदिर जाएँगे ?

Question ID : 63068051912

Q.18 रेखांकित पद का लिंग बदलकर वाक्य को पुनः लिखिए।
गीदड़ दौड़ रहा है।

- Ans
- ☒ A. गीदड़ी दौड़ रही है।
 - ☒ B. गीड़गें दौड़ रही है।
 - ☒ C. गीदड़े दौड़ रही है।
 - ☒ D. गीदड़ा दौड़ रही है।

Question ID : 63068051924

Q.19 निम्न में से विशेषण की उत्तमा अवस्था के शुद्ध रूप की पहचान करें?

Ans ☒ A. अधिकतम

☐ B. मधुरतम

☐ C. निकृष्टतम

☐ D. अल्पतम

Question ID : 63068055874

Q.20 सही विकल्प का चयन करें।
मोदी भारत का प्रधानमंत्री है।

Ans ☐ A. मोदी भारत ने प्रधानमंत्री हैं।

☐ B. मोदी भारत की प्रधानमंत्री है।

☒ C. मोदी भारत के प्रधानमंत्री हैं।

☐ D. मोदी भारत से प्रधानमंत्री हैं।

Question ID : 63068055683

Section : General Hindi 2

Q.1 सार्थक-निरर्थक शब्द युग्म का उदाहरण नहीं होगा -

Ans ☐ A. आप खाना-वाना खा लीजिए ।

☐ B. घर में सब ठीक-ठाक है ।

☐ C. आप पानी-वानी पी लीजिए ।

☒ D. उसे तो भला - बुरा कहने की आदत है ।

Question ID : 63068055729

Q.2 "धनुंकार" का संधि विच्छेद करें

Ans ☒ A. धनुः+टंकार

☐ B. धनुष+टंकार

☐ C. धनुंकर+आर

☐ D. धनुस+टंकार

Question ID : 63068055901

Q.3 यह तो _____ चिंतन का विषय है । रिक्त स्थान के लिए सर्वाधिक उपयुक्त शब्द है-

Ans ☐ A. गूड़

☐ B. गुढ़

☐ C. गुड़

☒ D. गूढ़

Question ID : 63068055745

Q.4 वह कुछ देते समय _____ का भेदभाव नहीं करता । रिक्त स्थान के लिए सर्वाधिक उपयुक्त युग्म शब्द है -

- Ans ☒ A. थोड़े - बहुत
☒ B. अपने - पराये
☒ C. गर्म - ठंडे
☒ D. बड़े - बड़ों

Question ID : 63068055721

Q.5 निम्नलिखित वाक्यों में से किस वाक्य में पर्याय शब्द युग्म का उदाहरण है ?-

- Ans ☒ A. 'आना-जाना' - मेरा बाहर आना-जाना लगा ही रहता है।
☒ B. 'अपना-अपना' - आप सभी अपना-अपना काम करें।
☒ C. 'माता-पिता' - हमें अपने माता-पिता का सम्मान करना चाहिए।
☒ D. 'धन-दौलत' - धन-दौलत पर अभिमान नहीं करना चाहिए।

Question ID : 63068055725

Q.6 'कृपण' का विलोम शब्द क्या है ?

- Ans ☒ A. उदय
☒ B. उदार
☒ C. उत्थान
☒ D. आर्ष

Question ID : 63068052060

Q.7 'उज्ज्वल' का उचित संधि विच्छेद है-

- Ans ☒ A. उत् + जल
☒ B. उज् + ज्वल
☒ C. उत् + ज्वल
☒ D. उद् + ज्वल

Question ID : 63068061017

Q.8 'निः + रोग' का संधि युक्त शब्द है-

- Ans ☒ A. नीरोग
☒ B. निःरोग
☒ C. निरोग
☒ D. नईरोग

Question ID : 63068061002

Q.9 इनमें से कौन-सा 'तत्पुरुष समास' का भेद नहीं है?

- Ans ☒ A. संबंध तत्पुरुष
☒ B. कर्ता तत्पुरुष
☒ C. करण तत्पुरुष
☒ D. संप्रदान तत्पुरुष

Question ID : 63068060740

Q.10 'कालीमिर्च' पद में कौन समास है।

Ans ☒ A. कर्मधारय

☒ B. बहुब्रीहि

☒ C. तत्पुरुष

☒ D. द्वन्द्व

Question ID : 63068060613

Comprehension:

यह कहना एक भूल है कि इच्छा, असंतोष, लोभ आदि के कारण मनुष्य आगे बढ़ने को प्रेरित होता है तथा समृद्धि प्राप्त करता है। वास्तव में इच्छा, असंतोष, लोभ आदि के कारण समाज में शोषण, कुटिलता, अत्याचार, भोगवृत्ति एवं अशांति को प्रोत्साहन मिला है। लोभ के कारण एक मिल खोलकर शोषण की चक्की चलाई जाती है। हमें इच्छाओं का दमन नहीं करना है, बल्कि उनका उदात्तीकरण करना है, शमन करना है, उन्हें स्वस्थ दिशा देनी है। सत्पुरुष कर्तव्य भावना से प्रेरित होते हैं, आदर्शों से प्रेरणा प्राप्त करते हैं एवं निस्वार्थ तथा इच्छामुक्त होकर भी धीरे-धीरे धीध रेरे साहसपूर्वक कर्म करते हुए उन्नति को स्वतः प्राप्त होते हैं। आदर्शों की कीमत पर, आदर्शों को छोड़कर उन्नत पद प्राप्त करना सत्पुरुषों को शोभा नहीं देता। सत्पुरुष उज्ज्वल भविष्य के लिए योजना बनाकर प्रयत्न करते हुए महोच्च आदर्शों को आँखों से ओझल नहीं होने देते। यदि साधक पदोन्नति, धन अथवा सत्ता प्राप्त करता है तो व्यक्तिगत इच्छा की तृप्ति के लिए नहीं प्रत्युत परोपकार के लिए, मानवमात्र की सेवा के लिए, ईश्वर की प्रसन्नता के लिए। साधक का कर्तव्य है कि अपने और समाज में भले के लिए व्यक्तिगत इच्छाओं से ऊपर उठ जाए।

SubQuestion No : 11

Q.11 निम्नलिखित में से 'लोभ' का विलोम शब्द कौन-सा है?

Ans ☒ A. संतोष

☒ B. लिप्सा

☒ C. तृष्णा

☒ D. लालसा

Question ID : 63068056186

Comprehension:

यह कहना एक भूल है कि इच्छा, असंतोष, लोभ आदि के कारण मनुष्य आगे बढ़ने को प्रेरित होता है तथा समृद्धि प्राप्त करता है। वास्तव में इच्छा, असंतोष, लोभ आदि के कारण समाज में शोषण, कुटिलता, अत्याचार, भोगवृत्ति एवं अशांति को प्रोत्साहन मिला है। लोभ के कारण एक मिल खोलकर शोषण की चक्की चलाई जाती है। हमें इच्छाओं का दमन नहीं करना है, बल्कि उनका उदात्तीकरण करना है, शमन करना है, उन्हें स्वस्थ दिशा देनी है। सत्पुरुष कर्तव्य भावना से प्रेरित होते हैं, आदर्शों से प्रेरणा प्राप्त करते हैं एवं निस्वार्थ तथा इच्छामुक्त होकर भी धीरे-धीरे धीध रेरे साहसपूर्वक कर्म करते हुए उन्नति को स्वतः प्राप्त होते हैं। आदर्शों की कीमत पर, आदर्शों को छोड़कर उन्नत पद प्राप्त करना सत्पुरुषों को शोभा नहीं देता। सत्पुरुष उज्ज्वल भविष्य के लिए योजना बनाकर प्रयत्न करते हुए महोच्च आदर्शों को आँखों से ओझल नहीं होने देते। यदि साधक पदोन्नति, धन अथवा सत्ता प्राप्त करता है तो व्यक्तिगत इच्छा की तृप्ति के लिए नहीं प्रत्युत परोपकार के लिए, मानवमात्र की सेवा के लिए, ईश्वर की प्रसन्नता के लिए। साधक का कर्तव्य है कि अपने और समाज में भले के लिए व्यक्तिगत इच्छाओं से ऊपर उठ जाए।

SubQuestion No : 12

Q.12 सत्पुरुष धन-प्राप्ति किसलिए करता है?

Ans ☒ A. परोपकार के लिए

☒ B. अपने आदर्शों के लिए

☒ C. इच्छा की तृप्ति के लिए

☒ D. स्वहित के लिए

Question ID : 63068056185

Comprehension:

यह कहना एक भूल है कि इच्छा, असंतोष, लोभ आदि के कारण मनुष्य आगे बढ़ने को प्रेरित होता है तथा समृद्धि प्राप्त करता है। वास्तव में इच्छा, असंतोष, लोभ आदि के कारण समाज में शोषण, कुटिलता, अत्याचार, भोगवृत्ति एवं अशांति को प्रोत्साहन मिला है। लोभ के कारण एक मिल खोलकर शोषण की चक्की चलाई जाती है। हमें इच्छाओं का दमन नहीं करना है, बल्कि उनका उदात्तीकरण करना है, शमन करना है, उन्हें स्वस्थ दिशा देनी है। सत्पुरुष कर्तव्य भावना से प्रेरित होते हैं, आदर्शों से प्रेरणा प्राप्त करते हैं एवं निस्वार्थ तथा इच्छामुक्त होकर भी धीरे-धीरे धीध रे-रे साहसपूर्वक कर्म करते हुए उन्नति को स्वतः प्राप्त होते हैं। आदर्शों की कीमत पर, आदर्शों को छोड़कर उन्नत पद प्राप्त करना सत्पुरुषों को शोभा नहीं देता। सत्पुरुष उज्ज्वल भविष्य के लिए योजना बनाकर प्रयत्न करते हुए महोच्च आदर्शों को आँखों से ओझल नहीं होने देते। यदि साधक पदोन्नति, धन अथवा सत्ता प्राप्त करता है तो व्यक्तिगत इच्छा की तृप्ति के लिए नहीं प्रत्युत परोपकार के लिए, मानवमात्र की सेवा के लिए, ईश्वर की प्रसन्नता के लिए। साधक का कर्तव्य है कि अपने और समाज में भले के लिए व्यक्तिगत इच्छाओं से ऊपर उठ जाए।

SubQuestion No : 13

Q.13 उपर्युक्त गद्यांश का सर्वाधिक उपयुक्त शीर्षक लिखिए -

- Ans
- ☒ A. लोभ के दोष
 - ☒ B. इच्छा और लोभ
 - ☒ C. इच्छाओं का उदात्तीकरण
 - ☒ D. इच्छा और मनुष्य

Question ID : 63068056189

Comprehension:

यह कहना एक भूल है कि इच्छा, असंतोष, लोभ आदि के कारण मनुष्य आगे बढ़ने को प्रेरित होता है तथा समृद्धि प्राप्त करता है। वास्तव में इच्छा, असंतोष, लोभ आदि के कारण समाज में शोषण, कुटिलता, अत्याचार, भोगवृत्ति एवं अशांति को प्रोत्साहन मिला है। लोभ के कारण एक मिल खोलकर शोषण की चक्की चलाई जाती है। हमें इच्छाओं का दमन नहीं करना है, बल्कि उनका उदात्तीकरण करना है, शमन करना है, उन्हें स्वस्थ दिशा देनी है। सत्पुरुष कर्तव्य भावना से प्रेरित होते हैं, आदर्शों से प्रेरणा प्राप्त करते हैं एवं निस्वार्थ तथा इच्छामुक्त होकर भी धीरे-धीरे धीध रे-रे साहसपूर्वक कर्म करते हुए उन्नति को स्वतः प्राप्त होते हैं। आदर्शों की कीमत पर, आदर्शों को छोड़कर उन्नत पद प्राप्त करना सत्पुरुषों को शोभा नहीं देता। सत्पुरुष उज्ज्वल भविष्य के लिए योजना बनाकर प्रयत्न करते हुए महोच्च आदर्शों को आँखों से ओझल नहीं होने देते। यदि साधक पदोन्नति, धन अथवा सत्ता प्राप्त करता है तो व्यक्तिगत इच्छा की तृप्ति के लिए नहीं प्रत्युत परोपकार के लिए, मानवमात्र की सेवा के लिए, ईश्वर की प्रसन्नता के लिए। साधक का कर्तव्य है कि अपने और समाज में भले के लिए व्यक्तिगत इच्छाओं से ऊपर उठ जाए।

SubQuestion No : 14

Q.14 उपर्युक्त गद्यांश में 'प्रोत्साहन' का अर्थ है -

- Ans
- ☒ A. प्रतिक्रिया
 - ☒ B. क्षरण
 - ☒ C. उत्साह
 - ☒ D. बढ़ावा

Question ID : 63068056187

Comprehension:

यह कहना एक भूल है कि इच्छा, असंतोष, लोभ आदि के कारण मनुष्य आगे बढ़ने को प्रेरित होता है तथा समृद्धि प्राप्त करता है। वास्तव में इच्छा, असंतोष, लोभ आदि के कारण समाज में शोषण, कुटिलता, अत्याचार, भोगवृत्ति एवं अशांति को प्रोत्साहन मिला है। लोभ के कारण एक मिल खोलकर शोषण की चक्की चलाई जाती है। हमें इच्छाओं का दमन नहीं करना है, बल्कि उनका उदात्तीकरण करना है, शमन करना है, उन्हें स्वस्थ दिशा देनी है। सत्पुरुष कर्तव्य भावना से प्रेरित होते हैं, आदर्शों से प्रेरणा प्राप्त करते हैं एवं निस्वार्थ तथा इच्छामुक्त होकर भी धीरे-धीरे धीधरे साहसपूर्वक कर्म करते हुए उन्नति को स्वतः प्राप्त होते हैं। आदर्शों की कीमत पर, आदर्शों को छोड़कर उन्नत पद प्राप्त करना सत्पुरुषों को शोभा नहीं देता। सत्पुरुष उज्ज्वल भविष्य के लिए योजना बनाकर प्रयत्न करते हुए महोच्च आदर्शों को आँखों से ओझल नहीं होने देते। यदि साधक पदोन्नति, धन अथवा सत्ता प्राप्त करता है तो व्यक्तिगत इच्छा की तृप्ति के लिए नहीं प्रत्युत परोपकार के लिए, मानवमात्र की सेवा के लिए, ईश्वर की प्रसन्नता के लिए। साधक का कर्तव्य है कि अपने और समाज में भले के लिए व्यक्तिगत इच्छाओं से ऊपर उठ जाए।

SubQuestion No : 15

Q.15 निम्नलिखित में से 'दमन' का पर्यायवाची शब्द कौन-सा है?

- Ans ☒ A. विरोध
☒ B. अनुसरण
☒ C. निग्रह
☒ D. स्वीकार

Question ID : 63068056188

Comprehension:

वर्तमान समय में भारत एक बड़ा लोकतांत्रिक देश है। यह 1947 ई. में स्वतंत्र हुआ है। उस समय भारत के राष्ट्रीय आन्दोलन के नेता व प्रबुद्ध जन भारत की नयी शासन व्यवस्था के बारे में चिंतित थे। उन्होंने कई वर्षों के अथक प्रयासों से पूरे विश्व से शासन व सुशासन प्रक्रिया के विचार लेकर उन्हें एक जगह संगृहीत किया। इन विचारों व शासन की कार्यविधि को बताने वाले दस्तावेज को ही संविधान कहा गया। लगभग सभी लोकतांत्रिक व्यवस्था रखने वाले देशों का अपना संविधान होता है। भारतीय संविधान में लोकतंत्र, समाजवाद, धर्म निरपेक्षता भारतीय जनता के राष्ट्रीय लक्ष्य माने गए हैं। हमारे देश के संविधान ने यहाँ लोकतांत्रिक पद्धति की स्थापना की है। लोकतांत्रिक शासन प्रणाली के अंतर्गत मनमाने ढंग से निर्णय लिए जाने की सम्भावना नहीं होती है। यह लोकतांत्रिक शासन जनता के प्रति उत्तरदायी होता है। भारत में प्रत्येक नागरिक को छह मौलिक अधिकार दिए गए हैं। हर व्यसक नागरिक को मतदान करने तथा चुनाव लड़ने का अधिकार है।

SubQuestion No : 16

Q.16 लोकतांत्रिक शासन किसके प्रति उत्तरदायी होता है?

- Ans ☒ A. सेना के प्रति
☒ B. जनता के प्रति
☒ C. न्यायलय के प्रति
☒ D. राज्यों के प्रति

Question ID : 63068049275

Comprehension:

वर्तमान समय में भारत एक बड़ा लोकतांत्रिक देश है। यह 1947 ई. में स्वतंत्र हुआ है। उस समय भारत के राष्ट्रीय आन्दोलन के नेता व प्रबुद्ध जन भारत की नयी शासन व्यवस्था के बारे में चिंतित थे। उन्होंने कई वर्षों के अथक प्रयासों से पूरे विश्व से शासन व सुशासन प्रक्रिया के विचार लेकर उन्हें एक जगह संगृहीत किया। इन विचारों व शासन की कार्यविधि को बताने वाले दस्तावेज को ही संविधान कहा गया। लगभग सभी लोकतांत्रिक व्यवस्था रखने वाले देशों का अपना संविधान होता है। भारतीय संविधान में लोकतंत्र, समाजवाद, धर्म निरपेक्षता भारतीय जनता के राष्ट्रीय लक्ष्य माने गए हैं। हमारे देश के संविधान ने यहाँ लोकतांत्रिक पद्धति की स्थापना की है। लोकतांत्रिक शासन प्रणाली के अंतर्गत मनमाने ढंग से निर्णय लिए जाने की सम्भावना नहीं होती है। यह लोकतांत्रिक शासन जनता के प्रति उत्तरदायी होता है। भारत में प्रत्येक नागरिक को छह मौलिक अधिकार दिए गए हैं। हर व्यसक नागरिक को मतदान करने तथा चुनाव लड़ने का अधिकार है।

SubQuestion No : 17

Q.17 भारत में प्रत्येक नागरिक को कितने मौलिक अधिकार प्रदान किए गए हैं ?

- Ans
- ☐ A. पांच
 - ☐ B. सात
 - ☐ C. आठ
 - ☒ D. छह

Question ID : 63068049274

Comprehension:

वर्तमान समय में भारत एक बड़ा लोकतांत्रिक देश है। यह 1947 ई. में स्वतंत्र हुआ है। उस समय भारत के राष्ट्रीय आन्दोलन के नेता व प्रबुद्ध जन भारत की नयी शासन व्यवस्था के बारे में चिंतित थे। उन्होंने कई वर्षों के अथक प्रयासों से पूरे विश्व से शासन व सुशासन प्रक्रिया के विचार लेकर उन्हें एक जगह संगृहीत किया। इन विचारों व शासन की कार्यविधि को बताने वाले दस्तावेज को ही संविधान कहा गया। लगभग सभी लोकतांत्रिक व्यवस्था रखने वाले देशों का अपना संविधान होता है। भारतीय संविधान में लोकतंत्र, समाजवाद, धर्म निरपेक्षता भारतीय जनता के राष्ट्रीय लक्ष्य माने गए हैं। हमारे देश के संविधान ने यहाँ लोकतांत्रिक पद्धति की स्थापना की है। लोकतांत्रिक शासन प्रणाली के अंतर्गत मनमाने ढंग से निर्णय लिए जाने की सम्भावना नहीं होती है। यह लोकतांत्रिक शासन जनता के प्रति उत्तरदायी होता है। भारत में प्रत्येक नागरिक को छह मौलिक अधिकार दिए गए हैं। हर व्यसक नागरिक को मतदान करने तथा चुनाव लड़ने का अधिकार है।

SubQuestion No : 18

Q.18 हमारे देश के संविधान में किस पद्धति को अपनाया गया है?

- Ans
- ☐ A. समाजवाद
 - ☒ B. लोकतंत्र
 - ☐ C. राजतंत्र
 - ☐ D. तानाशाह

Question ID : 63068049276

Comprehension:

वर्तमान समय में भारत एक बड़ा लोकतांत्रिक देश है। यह 1947 ई. में स्वतंत्र हुआ है। उस समय भारत के राष्ट्रीय आन्दोलन के नेता व प्रबुद्ध जन भारत की नयी शासन व्यवस्था के बारे में चिंतित थे। उन्होंने कई वर्षों के अथक प्रयासों से पूरे विश्व से शासन व सुशासन प्रक्रिया के विचार लेकर उन्हें एक जगह संगृहीत किया। इन विचारों व शासन की कार्यविधि को बताने वाले दस्तावेज को ही संविधान कहा गया। लगभग सभी लोकतांत्रिक व्यवस्था रखने वाले देशों का अपना संविधान होता है। भारतीय संविधान में लोकतंत्र, समाजवाद, धर्म निरपेक्षता भारतीय जनता के राष्ट्रीय लक्ष्य माने गए हैं। हमारे देश के संविधान ने यहाँ लोकतांत्रिक पद्धति की स्थापना की है। लोकतांत्रिक शासन प्रणाली के अंतर्गत मनमाने ढंग से निर्णय लिए जाने की सम्भावना नहीं होती है। यह लोकतांत्रिक शासन जनता के प्रति उत्तरदायी होता है। भारत में प्रत्येक नागरिक को छह मौलिक अधिकार दिए गए हैं। हर व्यसक नागरिक को मतदान करने तथा चुनाव लड़ने का अधिकार है।

SubQuestion No : 19

Q.19 उपर्युक्त गद्यांश का शीर्षक क्या है?

- Ans
- ☒ A. भारतीय लोकतंत्र
 - ☐ B. भारतीय शासन व्यवस्था
 - ☐ C. भारतीय संविधान
 - ☐ D. धर्मनिरपेक्षता

Question ID : 63068049277

Comprehension:

वर्तमान समय में भारत एक बड़ा लोकतांत्रिक देश है। यह 1947 ई. में स्वतंत्र हुआ है। उस समय भारत के राष्ट्रीय आन्दोलन के नेता व प्रबुद्ध जन भारत की नयी शासन व्यवस्था के बारे में चिंतित थे। उन्होंने कई वर्षों के अथक प्रयासों से पूरे विश्व से शासन व सुशासन प्रक्रिया के विचार लेकर उन्हें एक जगह संगृहीत किया। इन विचारों व शासन की कार्यविधि को बताने वाले दस्तावेज को ही संविधान कहा गया। लगभग सभी लोकतांत्रिक व्यवस्था रखने वाले देशों का अपना संविधान होता है। भारतीय संविधान में लोकतंत्र, समाजवाद, धर्म निरपेक्षता भारतीय जनता के राष्ट्रीय लक्ष्य माने गए हैं। हमारे देश के संविधान ने यहाँ लोकतांत्रिक पद्धति की स्थापना की है। लोकतांत्रिक शासन प्रणाली के अंतर्गत मनमाने ढंग से निर्णय लिए जाने की सम्भावना नहीं होती है। यह लोकतांत्रिक शासन जनता के प्रति उत्तरदायी होता है। भारत में प्रत्येक नागरिक को छह मौलिक अधिकार दिए गए हैं। हर व्यसक नागरिक को मतदान करने तथा चुनाव लड़ने का अधिकार है।

SubQuestion No : 20

Q.20 प्रबुद्ध शब्द का क्या अभिप्राय है ?

Ans ☒ A. राजनीतिक

☒ B. धार्मिक

☒ C. प्रखर

☒ D. चेतन

Question ID : 63068049278

