



Teachingninja.in



Latest Govt Job updates



Private Job updates



Free Mock tests available



Visit - teachingninja.in

DSSSB Junior Secretariat Assistant

**Previous Year Paper
9 April 2022 Shift 1
(English)**





GOVT. OF NCT OF DELHI
Delhi Subordinate Services Selection Board
FC-18, Institutional Area, Karkardooma, Delhi – 110092.
www.dsssb.delhigovt.nic.in

Participant ID	
Participant Name	
Test Center Name	
Test Date	09/04/2022
Test Time	8:30 AM - 10:30 AM
Subject	Junior Secretariat Assistant

Section : Mental Ability 1

Q.1 A certain number of people are sitting in a row, facing North. E sits third to the right of D. Only two people sit between A and C. Only six people sit between B and D. F sits to the immediate left of D. Only two people sit between C and D. E sits at one corner of the row. If no other person is sitting in the row, what is the total number of persons seated?

- Ans ☒ A. 14
☒ B. 11
☒ C. 15
☒ D. 10

Question ID : 63068060351

Q.2 Vinay starts from school and travels 35 km towards the west. He takes a right turn and travels 15 km, again takes right turn and travels 70 km. Finally he turns 45° in the clockwise direction and travels 10 km. In which direction is he facing now?

- Ans ☒ A. North-East
☒ B. South-West
☒ C. North-West
☒ D. South-East

Question ID : 63068050332

Q.3 Cricketers Piyush and Malan are standing in a row. Piyush is 14th from the left side of the row, and Malan is 20th from the right side of the row. If they interchange their positions, Piyush becomes 27th from the left. The number of cricketers standing between Piyush and Malan is:

- Ans ☒ A. 12
☒ B. 10
☒ C. 11
☒ D. 14

Question ID : 63068060324

Q.4 A company provides apartments to five of its employees, that is the manager, CEO, CFO, accountant and helper in a building. The ground floor is numbered as the second floor and the floor above the ground floor is numbered as the third floor and so on. Only one employee stays between the floor on which the CEO and the CFO stay. The CFO stays exactly on the floor above the floor on which the helper stays. The accountant stays on an even-numbered floor below the floor where the CFO stays, but not immediately below. The manager stays on the fifth floor. On which floor does the accountant stay?

- Ans
- ☒ A. Second
 - ☐ B. Fourth
 - ☐ C. Sixth
 - ☐ D. Third

Question ID : 63068059390

Q.5 Sohan travels 45 km to the north from his sister's home, then turns left and travel 55 km. He again turns left and travels 34 km. Finally, he turns left again and travels 115 km to reach his house. What is the shortest distance between his sister's home and his house and in which direction is his house with respect to his starting point?

- Ans
- ☐ A. 61 km, North-West
 - ☐ B. 89 km, North-East
 - ☐ C. 791 km, North-East
 - ☒ D. 61 km, North-East

Question ID : 63068050337

Q.6 In a certain code language,
'M + N' means 'M is the daughter of N',
'M - N' means 'M is the father of N',
'M * N' means 'M is the wife of N',
'M \$ N' means 'M is the son of N'.
Based on the above, how is J related to T, if 'J + K - T'?

- Ans
- ☐ A. Mother
 - ☒ B. Sister
 - ☐ C. Mother's sister
 - ☐ D. Daughter

Question ID : 63068051827

Q.7 Vijay has a collection of five ribbons, A, B, C, D and E, each of different lengths. A is longer than B. A is longer than E. C is longer than D. B is longer than E. E is longer than C. Which ribbon is the shortest?

- Ans
- ☐ A. E
 - ☐ B. C
 - ☐ C. B
 - ☒ D. D

Question ID : 63068057435

Q.8 LAST is related to CNUV in a certain way based on the English alphabetical order. In the same way, MOST is related to QOUV. To which of the following is PART related, following the same logic?

- Ans
- ☐ A. RCTV
 - ☐ B. CVRT
 - ☐ C. RCVT
 - ☒ D. CRTV

Question ID : 63068056943

Q.9 N is the daughter of P who is the mother of O. O is the daughter of K. K is the son of M. L is the father-in-law of P. O's daughter's father is T. Y is the sister of T. How many male members are there in the family?

- Ans
- ☐ A. Two
 - ☐ B. Four
 - ☐ C. One
 - ☒ D. Three

Question ID : 63068056931

Q.10 Read the given statements and conclusions carefully. Assuming that the information given in the statements is true, even if it appears to be at variance with commonly known facts, decide which of the given conclusions logically follow(s) from the statements.

Statements:
Some rivers are lakes.
Some lakes are ponds.

Conclusions:
(I) All rivers can never be ponds.
(II) All ponds can never be lakes.

- Ans
- ☒ A. Neither conclusion I nor II follows
 - ☐ B. Only conclusion I follows
 - ☐ C. Only conclusion II follows
 - ☐ D. Both conclusions I and II follow

Question ID : 63068063593

Q.11 Read the given statements and conclusions carefully. Assuming that the information given in the statements is true, even if it appears to be at variance with commonly known facts, decide which of the given conclusions logically follow(s) from the statements.

Statements:
Few desserts are blocks.
Most blocks are parks.
All parks are fabrics.

Conclusions:
(I) Few desserts are parks.
(II) Some fabrics are desserts.
(III) Some blocks are fabrics.

- Ans ☒ A. Only conclusion III follows
- ☒ B. Either conclusion I or conclusion II follows
- ☒ C. Only conclusion I follows
- ☒ D. All the conclusions I, II and III follow

Question ID : 63068063288

Q.12 Mohina has a work experience of 2 years. She scored 74% marks in the interview. She was born on 2 Feb 1986. She completed her graduation with 62% marks. She secured 67% marks in class 12th. She also has a certification in a management course.

- Ans ☒ A. Candidate is to be rejected.
- ☒ B. Candidate is to be selected.
- ☒ C. Selection to be kept on hold.
- ☒ D. Data is not sufficient to conclude.

Question ID : 63068057962

Q.13 How many such pairs of letters are there in the word 'WISDOM' (in both forward and backward directions) that have as many letters between them as there are in the English alphabetical order?

- Ans ☒ A. Two
- ☒ B. One
- ☒ C. None
- ☒ D. Three

Question ID : 63068053464

Q.14 In a certain code language, METAPHYSICS is written as NVGZKSBHRXH. How will EPISTOMOLOGY be written in that language?

- Ans ☒ A. BT LOLNVKRHGL
- ☒ B. BT LOLNLGHRKV
- ☒ C. VKRHGLNLOLT B
- ☒ D. VKRHGLBT LOLN

Question ID : 63068050916

Q.15 There are 124 JEE mathematics books arranged in a row at a library. Trigonometry is 55th from the left side of the row and Calculus is 60th from the right side of the row. What is the total number of books between Trigonometry and Calculus?

- Ans ☒ A. 7
☒ B. 11
☒ C. 10
☒ D. 9

Question ID : 63068060326

Q.16 In this question, a statement is followed by two conclusions, numbered I and II. Find out which conclusion(s) is/are true based on the given statement.

Statements:

$$A > X \leq Y = Z < W > N$$

Conclusions:

I. $A > W$

II. $X < N$

- Ans ☒ A. Neither conclusion I nor conclusion II is true.
☒ B. Only conclusion II is true.
☒ C. Both conclusions I and II are true.
☒ D. Only conclusion I is true.

Question ID : 63068058988

Q.17 In a certain code language,
'P * Q' means 'P is the father of Q',
'P # Q' means 'P is the sister of Q',
'P + Q' means 'P is the brother of Q',
'P = Q' means 'P is the mother of Q',
'P - Q' means 'P is the son of Q'.
Based on the above, how is P related to S, if 'P * Q * R + S'?

- Ans ☒ A. Brother
☒ B. Father's father
☒ C. Father's brother
☒ D. Father

Question ID : 63068051831

Q.18 Read the given statement and conclusions carefully. Assuming that the information given in the statements is true, even if it appears to be at variance with commonly known facts, decide which of the given conclusions is true based on the given statement.

Statement: $L \geq D > O \leq G \geq U > K$

Conclusions:

I. $G > K$

II. $O < U$

- Ans ☒ A. Neither conclusion I nor II is true
☒ B. Only conclusion I is true
☒ C. Only conclusion II is true
☒ D. Both conclusion I and II are true

Question ID : 63068057415

Q.19 How many such pairs of letters are there in the word 'REVISION' (in both forward and backward directions) that have as many letters between them as there are in the English alphabetical order?

- Ans
- ☒ A. Three
 - ☒ B. One
 - ☒ C. Two
 - ☒ D. Four

Question ID : 63068053456

Q.20 DISPLAY is related to ZUKNRCE in a certain way based on the English alphabetical order. In the same way, EVIDENT is related to YHUZYPJ. To which of the following is FORTUNE related, following the same logic?

- Ans
- ☒ A. COLJIPZ
 - ☒ B. COLJIPY
 - ☒ C. XOLJIPZ
 - ☒ D. XOLJIPY

Question ID : 63068056965

Section : Mental Ability 2

Q.1 Select the number from among the given options that can replace the question mark (?) in the following series.

24, 28, 26, 30, 28, ?

- Ans
- ☒ A. 32
 - ☒ B. 31
 - ☒ C. 34
 - ☒ D. 30

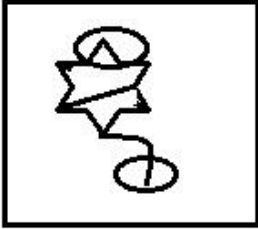
Question ID : 63068058879

Q.2 Select the option in which the given figure is embedded (rotation is NOT allowed).



Ans

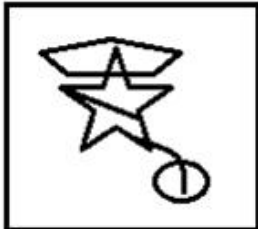
✗ A.



✗ B.



✗ C.



✓ D.



Question ID : 63068058070

Q.3 Four letter-clusters have been given, out of which three are alike in some manner and one is different. Select the one that is different.

Ans ✗ A. EGMO

✗ B. BDJL

✗ C. FHNP

✓ D. QSXZ

Question ID : 63068050155

Q.4 If + means \times , \times means $-$, $-$ means \div , and \div means $+$, then what will be the value of the given expression?

$$103 \div 2 \times 5 + 200 - 3 = ?$$

Ans ☒ A. -228.33

☐ B. 454.5

☐ C. 0.25

☐ D. 207.3

Question ID : 63068049507

Q.5 In the following triad, each group of letters is related to the subsequent one following a certain logic. Select from the given options, the triad which follows the same logic.

AEI - IEA - OUA

Ans ☐ A. TPM - TAI - POR

☒ B. EIU - OAU - AEI

☐ C. RCR - DFN - VLS

☐ D. SBJ - CT D - NMF

Question ID : 63068049436

Q.6 Select the pair from among the given options that is analogous to the given pair.

RED : VIH

Ans ☐ A. SIX : VLA

☒ B. PAW : T EA

☐ C. DJH : AGE

☐ D. YAM : JOY

Question ID : 63068056982



Q.7 Select the figure from among the given options that can replace the question mark (?) in the following series.

E	A	A	U	U	I	I	O	
	U		I		O		E	?
I		O	O	E	E	A	A	U

Ans

☒ A.

E		A
	U	
I		O

☒ B.

A		E
	U	
I		O

☒ C.

O		E
	I	
U		A

☒ D.

O		E
	A	
U		I

Question ID : 63068056577

Q.8 If '÷' means '+', '×' means '÷', '+' means '-' and '-' means '×', then what will be the value of the following expression?

$15 \div 45 \times 9 - 5 + 25$

Ans ☒ A. 18

☒ B. 15

☒ C. 23

☒ D. 20

Question ID : 63068049086

Q.9 Select the option that is related to the third number in the same way as the second number is related to the first number.

$16 : 64 :: 49 : ?$

Ans ☒ A. 441

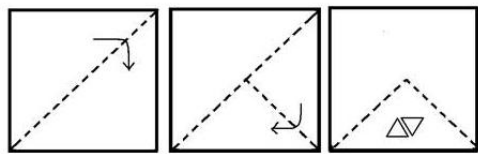
☒ B. 245

☒ C. 294

☒ D. 343

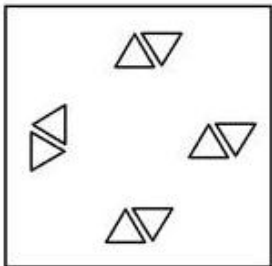
Question ID : 63068050664

Q.10 The sequence of folding a piece of paper and the manner in which the folded paper has been cut is shown in the following figures. How would this paper look when unfolded?

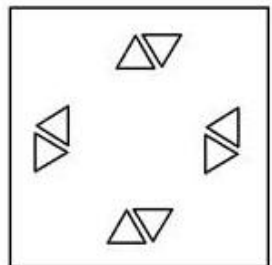


Ans

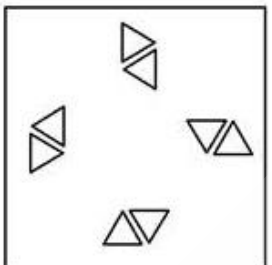
☐ A.




☒ B.



☐ C.



☐ D.



Question ID : 63068058617

Q.11 Select the figure that will replace the question mark (?) in the following series.

=	S	S	=		O	★	+	C
C	+	★	O	?	+	C	O	★
★	O		+		S	=	S	

Ans

✓ A.

★	O
S	=
+	C

✗ B.

★	O
=	S
+	C

✗ C.

O	★
=	S
C	+

✗ D.

O	★
S	=
+	C

Question ID : 63068057309

Q.12 Following a certain logic, if 9 is related to 27 and 11 is related to 33, to which of the following is 14 related?

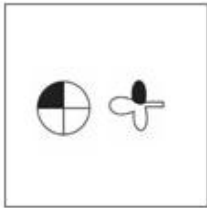
- Ans
- ✗ A. 32
 - ✓ B. 42
 - ✗ C. 26
 - ✗ D. 30

Question ID : 63068057005

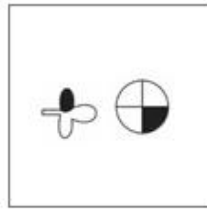
Q.13 Four figures have been given, out of which three are alike in some manner and one is different. Select the one that is different.

Ans

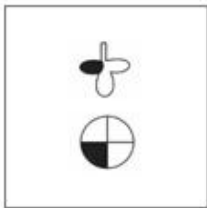
☒ A.



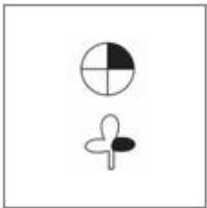
☒ B.



☒ C.



☒ D.



Question ID : 63068049720

Q.14 Select the number from among the given options that can replace the question mark (?) in the following series.

26, 28, 30, 33, 38, 43, ?

Ans

☒ A. 53

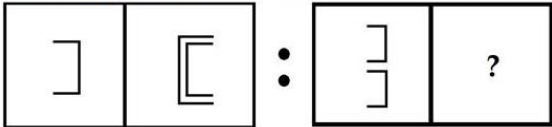
☒ B. 50

☒ C. 52

☒ D. 54

Question ID : 63068056574

Q.15 Select the option that is related to the third figure in the same way as the second figure is related to the first figure.

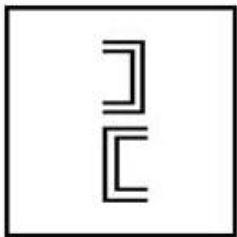


Ans

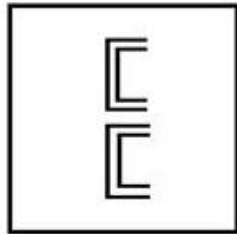
☐ A.



☐ B.



☒ C.

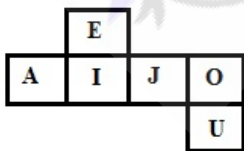


☐ D.



Question ID : 63068058604

Q.16 A cube is made by folding the given sheet. In the cube so formed, which of the following pairs of letters will be on opposite sides?



☐ A. J and U

☒ B. I and O

☐ C. I and U

☐ D. E and J

Question ID : 63068058133

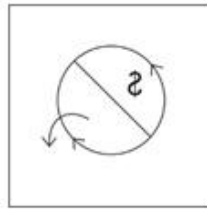
Q.17 Four figures have been given, out of which three are alike in some manner and one is different. Select the one that is different.

Ans

☒ A.



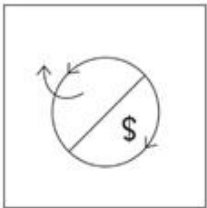
☒ B.



☒ C.



☒ D.



Question ID : 63068049722

Q.18 Four pairs of letter-clusters have been given, out of which three are alike in some manner and one is different. Select the one that is different.

Ans ☒ A. RWN : QYS

☒ B. LPQ : TRM


☒ C. JNS : VPK

☒ D. FJW : ZLH

Question ID : 63068050433

Comprehension:

Study the given diagram carefully and answer the questions that follow. The numbers in each section indicate the number of persons.



SubQuestion No : 19

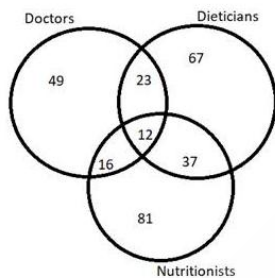
Q.19 How many Doctors are also Nutritionists but NOT Dieticians?

- Ans ☒ A. 37
☒ B. 23
☒ C. 67
☒ D. 16

Question ID : 63068057068

Comprehension:

Study the given diagram carefully and answer the questions that follow. The numbers in each section indicate the number of persons.



SubQuestion No : 20

Q.20 How many Dieticians are NOT Nutritionists?

- Ans ☒ A. 49
☒ B. 90
☒ C. 37
☒ D. 67

Question ID : 63068057067

Section : General Awareness 1

Q.1 Who among the following Sikh Gurus created the order of the Khalsa to defend dharma?

- Ans ☒ A. Guru Ram Das
☒ B. Guru Teg Bahadur
☒ C. Guru Har Kishan
☒ D. Guru Gobind Singh

Question ID : 63068052256

Q.2 Intensified Mission Indradhanush 3.0 (IMI 3.0) was launched in year _____.

- Ans ☒ A. 2014
☒ B. 2021
☒ C. 2019
☒ D. 2016

Question ID : 63068059668

Q.3 What is the purpose of grooves on the soles of shoes?

- Ans ☒ A. Is easy to wear
☒ B. Causes less friction
☒ C. Better grip on the floor
☒ D. Soles act as a cushion

Question ID : 63068062052

Q.4 Which of the following was the theme of Independence Day 2021?

- Ans ☒ A. Self-reliant India
☒ B. Nation First, Always First
☒ C. Sustainable Environment
☒ D. Preservation of Heritage

Question ID : 63068052911

Q.5 Who was the first winner of Jnanpith Award for literary works in Hindi?

- Ans ☒ A. Kunwar Narayan
☒ B. Mahadevi Verma
☒ C. Ramdhari Singh 'Dinkar'
☒ D. Sumitranandan Pant

Question ID : 63068048273

Q.6 Who is the author of the book "SachKahunToh: An Autobiography"?

- Ans ☒ A. Kaushik Basu
☒ B. Avtar Singh
☒ C. Meghna Pant
☒ D. Neena Gupta

Question ID : 63068052489

Q.7 What was Neeraj Chopra's position in 'World Athletics Men's Javelin Ranking' on 10 August 2021?

- Ans ☒ A. Fourth
☒ B. First
☒ C. Third
☒ D. Second

Question ID : 63068052582

Q.8 Atomic Energy Commission of India was established in the year_____.

- Ans ☒ A. 1967
☒ B. 1948
☒ C. 1955
☒ D. 1962

Question ID : 63068053658

Q.9 Which state government's assembly in 2021 passed a bill, making the encroachment of properties belonging to religious institutions a cognisable and non-bailable offence?

- Ans ☒ A. Andhra Pradesh
☒ B. Kerala
☒ C. Karnataka
☒ D. Tamil Nadu

Question ID : 63068053230

Q.10 The Indian Official Languages Act was passed in which of the following years?

- Ans ☒ A. 1966
☒ B. 1967
☒ C. 1965
☒ D. 1963

Question ID : 63068048256

Q.11 Which of the following particles are emitted by radioactive elements such as Polonium?

- Ans ☒ A. Beta
☒ B. Alpha
☒ C. Delta
☒ D. Gamma

Question ID : 63068052326

Q.12 Which of the following statements is correct about Meristem tissues of plants?

- Ans
- ☐ A. Meristematic tissues are found only on root tips.
 - ☐ B. Meristematic tissues are non-dividing tissues.
 - ☒ C. They have the ability to divide.
 - ☐ D. Plant's meristems are centres of carbohydrate storage.

Question ID : 63068056773

Q.13 Which of the following statements is correct about the C4 plant?

- Ans
- ☐ A. C4 plants absorb compare to other plants more light.
 - ☐ B. C4 plants absorb compare to other plants more CO₂.
 - ☒ C. C4 plants avoid photorespiration by using another enzyme called 'PEP'.
 - ☐ D. C4 plant has more amount of Enzyme Rubis CO.

Question ID : 63068059326

Q.14 Which is the following States/Union Territories has the highest record of population density, as per the 2011 Census?

- Ans
- ☐ A. Lakshadweep
 - ☐ B. Chandigarh
 - ☒ C. Delhi
 - ☐ D. Bihar

Question ID : 63068053200

Q.15 Who is considered as the founder of the wave theory of light?

- Ans
- ☐ A. Albert Einstein
 - ☒ B. Christiaan Huygens
 - ☐ C. Galileo Galilei
 - ☐ D. Zacharias Jansen

Question ID : 63068056742

Q.16 The 20th edition of the National Para-Swimming Championship was held from March 20 to 22, 2021 in Karnataka. In the team championship, Karnataka topped the charts with 362 points, followed by Maharashtra with _____.

- Ans
- ☐ A. 270 points
 - ☒ B. 279 points
 - ☐ C. 159 points
 - ☐ D. 269 points

Question ID : 63068052542

Q.17 Which of the following statements is INCORRECT about plant cells?

- Ans ☒ A. The cell wall of a plant is made up of phospholipid.
- ☒ B. Plasmodesmata are intercellular junctions between plant cells.
- ☒ C. The cell wall of a plant is non-living structure.
- ☒ D. Ribosomes are present in both animal and plant cells.

Question ID : 63068054328

Q.18 Which of the following is NOT a halogen gas?

- Ans ☒ A. Bromine
- ☒ B. Neon
- ☒ C. Fluorine
- ☒ D. Chlorine

Question ID : 63068054349

Q.19 Which of the following food nutrient is essential for growth and repair?

- Ans ☒ A. Carbohydrates
- ☒ B. Proteins
- ☒ C. Fats
- ☒ D. Vitamins

Question ID : 63068056777

Q.20 How many hand gestures are used in Mohiniyattam dance?

- Ans ☒ A. 19
- ☒ B. 45
- ☒ C. 34
- ☒ D. 24

Question ID : 63068057539

Section : General Awareness 2

Q.1 What is the width of a broad gauge track in Indian Railways?

- Ans ☒ A. 1.766 m
- ☒ B. 1.686 m
- ☒ C. 1.676 m
- ☒ D. 1.678 m

Question ID : 63068049571

Q.2 We can say that the population has 'stabilised', or has reached the 'replacement level', when:

- Ans ☒ A. the difference between the birth rate and the death rate is high
- ☒ B. the difference in the birth rate and the death rate is zero, or very small
- ☒ C. there is a steady increase in the death rate
- ☒ D. there is a steady increase in the birth rate

Question ID : 63068052886

Q.3 Which two forces are responsible for creating the two major tidal bulges on the opposite sides of Earth?

- Ans ☒ A. Applied force and friction force
- ☒ B. Air resistance force and centripetal force
- ☒ C. Gravitational and centrifugal force
- ☒ D. Tension force and normal force

Question ID : 63068061717

Q.4 In 1866, who discovered that the elements of the periodic table are placed in the order of increasing atomic masses and the physical and chemical properties of every eighth element are a repetition of the properties of the first element?

- Ans ☒ A. John Newlands
- ☒ B. Johann Wolfgang Döbereiner
- ☒ C. Lothar Meyer
- ☒ D. Dmitri Mendeleev

Question ID : 63068049586

Q.5 Which of the following institutions do NOT come under the control of the RBI?

- Ans ☒ A. Co-operative banks
- ☒ B. Co-operative societies
- ☒ C. National housing banks
- ☒ D. Regional rural banks

Question ID : 63068068601

Q.6 The Himalayan drainage system consists of three main river basins which are _____.

- Ans ☒ A. Ganga, Indus, Brahmaputra
- ☒ B. Ganga, Indus, Sutlej
- ☒ C. Indus, Brahmaputra, Bhagirathi
- ☒ D. Alaknanda, Bhagirathi, Jhelum

Question ID : 63068052366

Q.7 The famous Salt March led by Mahatma Gandhi was associated with the _____ movement.

- Ans
- ☐ A. Non-violence
 - ☒ B. Civil disobedience
 - ☐ C. Kheda Satyagraha
 - ☐ D. Quit India

Question ID : 63068053022

Q.8 Which of the following cyclones never hit the Indian subcontinent?

- Ans
- ☒ A. Galveston
 - ☐ B. Tauktae
 - ☐ C. Yaas
 - ☐ D. Gulab

Question ID : 63068062056

Q.9 A perfectly elastic supply curve is _____ to the x-axis and indicates _____ elasticity of supply.

- Ans
- ☐ A. perpendicular; infinite
 - ☐ B. perpendicular; zero
 - ☒ C. parallel; infinite
 - ☐ D. parallel; zero

Question ID : 63068068721

Q.10 Fundamental Duties are applicable on which of the following?

- Ans
- ☐ A. Citizens and foreigners both
 - ☐ B. Government officials
 - ☐ C. Some on citizens, some on foreigners
 - ☒ D. Citizens

Question ID : 63068053772

Q.11 Which of the following rivers marks the eastern-most boundary of the Himalayas?

- Ans
- ☐ A. The Satluj
 - ☐ B. The Teesta
 - ☐ C. The Ganga
 - ☒ D. The Brahmaputra

Question ID : 63068059337

Q.12 Fundamental Duties in the Indian Constitution were inspired by which Constitution?

- Ans
- ☐ A. The Constitution of Germany
 - ☐ B. The Constitution of France
 - ☐ C. The Constitution of Canada
 - ☒ D. The erstwhile USSR Constitution

Question ID : 63068053770

Q.13 The Mansabdari system was a grading system used by the Mughals. Which of the following was NOT primarily fixed by the Mughal emperor for a Mansabdar on his initial appointment?

- Ans
- ☐ A. Salary
 - ☐ B. Military responsibilities
 - ☒ C. Architectural responsibilities
 - ☐ D. Rank

Question ID : 63068053016

Q.14 Which of the following statements is INCORRECT about the Godavari river?

- Ans
- ☒ A. Godavari river discharges its water into the Arabian Sea.
 - ☐ B. Godavari river is the largest peninsular river.
 - ☐ C. Godavari rises in Nashik in Maharashtra.
 - ☐ D. Godavari river is known as Dakshin Ganga.

Question ID : 63068062028

Q.15 The Treaty of Pondicherry was signed after which War?

- Ans
- ☐ A. First Anglo-Sikh War, 1845-1846
 - ☐ B. First War of Independence, 1857
 - ☒ C. Second Anglo-French War, 1749-54
 - ☐ D. First Anglo-Mysore War, 1766-1769

Question ID : 63068070582

Q.16 Which of the following is a self-employment programme?

- Ans
- ☐ A. AWAS Yojana
 - ☐ B. NEP
 - ☐ C. MGNREGA
 - ☒ D. PMRY

Question ID : 63068059331

Q.17 Which of the following about the Northern Black Polished Ware is INCORRECT?

- Ans
- ☐ A. It is not always black, nor is it necessary polished.
 - ☐ B. It is a fine ware, sometimes as thin as 1.5 mm.
 - ☐ C. It is well-fired, wheel made deluxe pottery made of well-levigated clay.
 - ☒ D. It is only found in Northern India.

Question ID : 63068053052

Q.18 Which of the following institutes does NOT deliver microcredit?

- Ans
- ☐ A. Cooperative banks
 - ☐ B. Non-banking financial companies
 - ☐ C. Scheduled commercial banks
 - ☒ D. Payment banks

Question ID : 63068054257

Q.19 In which of the following months is the kharif crop harvested in India?

- Ans
- ☒ A. Between September and October
 - ☐ B. Between December and February
 - ☐ C. Between January and March
 - ☐ D. Between July and September

Question ID : 63068068551

Q.20 How many days did Mahatma Gandhi take to complete the Dandi March?

- Ans
- ☒ A. 24
 - ☐ B. 20
 - ☐ C. 22
 - ☐ D. 26

Question ID : 63068053575

Section : Arithmetic Ability 1

Q.1 $[35 - \{23 + 47 \div 2.5 \times 1.4\}] + [\{58 - 46 \times 3.6 \div 0.4\} - 45] = ?$

- Ans
- ☐ A. 69
 - ☐ B. 84
 - ☒ C. 78
 - ☐ D. 52

Question ID : 63068060148

Q.2 What should be the height of a solid cylinder having its diameter of base as 4 cm, if it is to be melted to be cast into a hollow cylinder having an external diameter of 14 cm, a thickness of 0.25 cm, and a height of 18 cm? (Give your answer correct to 3 places of decimal)

- Ans
- ☒ A. 12.862 cm
 - ☒ B. 15.469 cm
 - ☒ C. 9.3452 cm
 - ☒ D. 14.648 cm

Question ID : 63068068525

Q.3 $(3^2)^2 - 4 \times 36 \div 6 = ?$

- Ans
- ☒ A. 462
 - ☒ B. 57
 - ☒ C. 466
 - ☒ D. 55

Question ID : 63068060057

Q.4 The radius of the base and the height of a cylinder are increased by 20 percent each. Find the percentage increase in the total surface area of the cylinder.

- Ans
- ☒ A. 44 percent
 - ☒ B. 28 percent
 - ☒ C. 52 percent
 - ☒ D. 23 percent

Question ID : 63068067956

Q.5 Simplify the given expression.

$$\left(\frac{15}{2}\right)^{-2} \times \frac{75}{8} \times \left(\frac{12}{7}\right)$$

- Ans
- ☒ A. $\frac{6}{7}$
 - ☒ B. $\frac{2}{7}$
 - ☒ C. $\frac{1}{7}$
 - ☒ D. $\frac{1}{14}$

Question ID : 63068060070

Q.6 A man covers a total distance of 100 km on bicycle. For the first 3 hours, the speed was 20 km/h and for the rest of the journey, it came down to 10 km/h. The average speed for the whole journey is : (Correct to two decimal places).

- Ans
- ☐ A. 14 km/h
 - ☐ B. 13.29 km/h
 - ☐ C. 15 km/h
 - ☒ D. 14.29 km/h

Question ID : 63068052636

Q.7 The dimensions of the floor of a room are 10 m by 16 m. The floor has to be covered with square tiles of side 40 cm. How many tiles are needed?

- Ans
- ☐ A. 1600
 - ☐ B. 1250
 - ☒ C. 1000
 - ☐ D. 400

Question ID : 63068061308

Q.8 Find the least number of four digits which is divisible by 5,10,15 and 20.

- Ans
- ☐ A. 1080
 - ☐ B. 1040
 - ☒ C. 1020
 - ☐ D. 1060

Question ID : 63068051307

Q.9 A trapezium of area 280 cm^2 has parallel sides 14 cm apart. If the length of one of the parallel sides is 15 cm, what is the length (in cm) of the other parallel side?

- Ans
- ☐ A. 28
 - ☐ B. 30
 - ☐ C. 21
 - ☒ D. 25

Question ID : 63068061307

Q.10 Find the average of numbers 89, 91, 116, 117, 149, and 164.

- Ans
- ☐ A. 126
 - ☐ B. 136
 - ☒ C. 121
 - ☐ D. 131

Question ID : 63068066146

Q.11 Three successive discount of 30 percent on the marked price of a commodity are together equivalent to a single discount of:

- Ans ☒ A. 65.7 percent
☒ B. 64.5 percent
☒ C. 66.5 percent
☒ D. 67.5 percent

Question ID : 63068061237

Q.12 A loan of Rs.2,100 is to be paid in two instalments at 10% interest per annum compounded annually. How much should be paid in each instalment?

- Ans ☒ A. Rs.1,210
☒ B. Rs.1,050
☒ C. Rs.1,171
☒ D. Rs.1,200

Question ID : 63068059944

Q.13 What is the number of coins required, if one coin is 1.5 cm in diameter and 0.1 cm thick, to be melted to form a right circular cylinder of height 10 cm and diameter 4.5 cm?

- Ans ☒ A. 1200
☒ B. 900
☒ C. 250
☒ D. 450

Question ID : 63068058512

Q.14 The difference between two numbers is 1677. On dividing the larger number by the smaller, we get 4 as the quotient and 6 as the remainder. The smaller number is:

- Ans ☒ A. 257
☒ B. 557
☒ C. 437
☒ D. 627

Question ID : 63068051268

Q.15 What is the difference between the compound interest on ₹6,000 for 1 year at 4% per annum compounded yearly and half yearly?

- Ans ☒ A. ₹2.5
☒ B. ₹3.4
☒ C. ₹1.4
☒ D. ₹2.4

Question ID : 63068068496

Q.16 Find the cube of 0.265.

- Ans
- ☐ A. 0.861
 - ☐ B. 0.01816
 - ☐ C. 0.816
 - ☒ D. 0.01861

Question ID : 63068051289

Q.17 A trader allows 20% trade discount and 40% cash discount. If the selling price is ₹600 then the list price is:

- Ans
- ☐ A. ₹1,100
 - ☒ B. ₹1,250
 - ☐ C. ₹900
 - ☐ D. ₹1,370

Question ID : 63068066158

Q.18 A person saves 36% of his income. One year later, his income decreases by D%, due to loss incurred in his business. However, he decreases his expenditure by 20% and manages to save the same amount of money. What is the value of D? (Express your answer to the nearest whole number)

- Ans
- ☐ A. 17
 - ☐ B. 18
 - ☐ C. 20
 - ☒ D. 13

Question ID : 63068058316

Q.19 Express $2.\overline{32} + 3.\overline{57} - 4.\overline{63}$ as a vulgar fraction.

- Ans
- ☒ A. $\frac{125}{99}$
 - ☐ B. $\frac{105}{99}$
 - ☐ C. $\frac{115}{99}$
 - ☐ D. $\frac{135}{99}$

Question ID : 63068051275

Q.20 Sheetal received x marks in two of her tests and y marks in three other tests. Her average score in all the five tests in terms of x and y is:

- Ans
- ☒ A. $\frac{2x + 3y}{5}$
 - ☐ B. $\frac{2x + 3y}{2}$
 - ☐ C. $\frac{3x + 2y}{5}$
 - ☐ D. $\frac{2x + y}{5}$

Question ID : 63068067633

Section : Arithmetic Ability 2

Q.1 A clock is set right at 6 a.m., but it loses 18 min in 24 h. What will be the right time when the clock indicates 1 p.m. after 3 days?

- Ans
- ☐ A. 1:45 p.m.
 - ☐ B. 2:15 p.m.
 - ☐ C. 1:30 p.m.
 - ☒ D. 2 p.m.

Question ID : 63068060100

Q.2 In a 60-litre combination, the milk-to-water ratio is 2 : 1. If the ratio is 1 : 2, the amount of water to be added after that is:

- Ans
- ☐ A. 49 litres
 - ☐ B. 45 litres
 - ☐ C. 56 litres
 - ☒ D. 60 litres

Question ID : 63068064848

Q.3 Rs.20,000 is to be distributed between B and A such that B gets Rs.5,000 less than A. The ratio of the amount received by A to that received by B is:

- Ans
- ☒ A. 5 : 3
 - ☐ B. 4 : 3
 - ☐ C. 3 : 2
 - ☐ D. 4 : 6

Question ID : 63068061253

Q.4 A headphone is sold for ₹5,030 cash or for ₹2,630 cash down payment together with ₹2,410 to be paid after one month. Find the rate of interest charged in the instalment scheme.

- Ans
- ☐ A. 20% per annum
 - ☐ B. 10% per annum
 - ☐ C. 15% per annum
 - ☒ D. 5% per annum

Question ID : 63068068447

Q.5 Find cost price when the selling price is ₹1,190 and loss is 15%.

- Ans
- ☐ A. ₹1,350
 - ☒ B. ₹1,400
 - ☐ C. ₹1,280
 - ☐ D. ₹1,310

Question ID : 63068066155

Q.6 A loan of Rs.8,000 is to be returned at simple interest. After 4 years, Rs.5,000 is returned and at the end of sixth, the account is closed by paying Rs.4,520. What is the rate of interest charged?

- Ans
- ☒ A. 4 percent
 - ☐ B. 3 percent
 - ☐ C. 6 percent
 - ☐ D. 7 percent

Question ID : 63068061267

Q.7 A person weighing 80 kg starts a fitness regime and loses 12 kg in 3 months. Assuming that weight loss was uniform across all months, what is the percentage of weight lost per month?

- Ans
- ☒ A. 5 percent
 - ☐ B. 0.5 percent
 - ☐ C. 4 percent
 - ☐ D. 1.5 percent

Question ID : 63068060076

Q.8 In a circular race of 1200 m, A and B start from the same point and at the same time with speeds of 27km/h and 45 km/h, respectively. When will they meet again for the first time on the track when they are running in the same direction?

- Ans
- ☒ A. 240 seconds
 - ☐ B. 220 seconds
 - ☐ C. 280 seconds
 - ☐ D. 260 seconds

Question ID : 63068065186

Q.9 Dheeraj had ₹10, ₹20 and ₹50 notes in the ratio of 8 : 6 : 2, respectively. After giving ₹1,000 to his friend Vipul, he has ₹3,500 left. How many ₹20 notes did he have initially?

Ans ☒ A. 90

☐ B. 75

☐ C. 60

☐ D. 15

Question ID : 63068067978

Q.10 Which of the following between ratios 3 : 4 and 9 : 10 is greater?

Ans ☐ A. 12 : 8

☒ B. 9 : 10

☐ C. 10 : 5

☐ D. 3 : 4

Question ID : 63068065340

Q.11 K does half as much work as L in three-fourths of the time. If they can complete the work in 18 days working together, then the time required for L to complete the work alone is:

Ans ☐ A. 32 days

☒ B. 30 days

☐ C. 36 days

☐ D. 54 days

Question ID : 63068059962

Q.12 A, B and C can complete a piece of work in 4 days, 8 days and 12 days, respectively. All three of them work alone on every third day. A works alone on 1st, 4th, 7th ..., B works alone on 2nd, 5th, 8th ... and C works alone on 3rd, 6th, 9th ... This pattern is continued till the work is completed. In how much time (in days) is the entire work done?

Ans ☐ A. $7\frac{1}{3}$

☒ B. $6\frac{1}{3}$

☐ C. $5\frac{2}{3}$

☐ D. $4\frac{2}{3}$

Question ID : 63068061284

Q.13 A man swims downstream 60 km and upstream 36 km, taking 6 hours each time. What is his speed in still water?

- Ans ☐ A. 2 km/h
☒ B. 8 km/h
☐ C. 16 km/h
☐ D. 4 km/h

Question ID : 63068067873

Q.14 The sports club of a school has three teams for basketball, hockey and football. 150 students have been divided in the ratio of 6 : 4 : 5. What percentage (correct to one place of decimal) of the total students are hockey players, also find the basketball players are what percentage more than the football players?

- Ans ☐ A. 20%, 26.7%
☐ B. 6.7%, 36.4%
☐ C. 36.4%, 6.7%
☒ D. 26.7%, 20%

Question ID : 63068065118

Q.15 If the cost price of 15 articles is the same as the selling price of 12 articles, then what is the profit or loss percent?

- Ans ☐ A. 20% profit
☒ B. 25% profit
☐ C. 25% loss
☐ D. 20% loss

Question ID : 63068067277

Q.16 In an election between two candidates, 76% of the voters cast their votes, out of which 3% of the votes were declared invalid. A candidate got 9263 votes, which were 76% of the total valid votes. Find the total number of votes cast in that election.

- Ans ☐ A. 16453
☐ B. 16435
☒ C. 16533
☐ D. 16543

Question ID : 63068068415

Q.17 A, B and C can do a piece of work in 16 days, 24 days and 12 days, respectively. They work together and complete the work in a certain number of days for which they are paid Rs.2,403. What would be A, B and C's share (in Rs.), respectively?

- Ans ☐ A. 1,068, 534 and 801
☒ B. 801, 534 and 1,068
☐ C. 534, 801 and 1,068
☐ D. 534, 1,068 and 801

Question ID : 63068061276

Q.18 Prakash sold two tables for ₹2,484 each, a profit of 8% on one and a loss of 8% on the other. What is the total profit/loss for the transaction?

- Ans ☒ A. 0
- ☒ B. Loss 16/25%
- ☒ C. Loss 25/16%
- ☒ D. Profit 16/25%

Question ID : 63068059526

Comprehension:

Study the given table and answer the questions that follow.

The table shows the monthly salary (in ₹) of employees in a factory.

Salary (in ₹)	up to 30,000	up to 32,000	up to 34,000	up to 36,000	up to 38,000	up to 40,000
Number of employees	16	28	37	44	47	50

SubQuestion No : 19

Q.19 How many employees have a salary of Rs.36,000 or more?

- Ans ☒ A. 17
- ☒ B. 13
- ☒ C. 11
- ☒ D. 15

Question ID : 63068065330



Comprehension:

Study the given table and answer the questions that follow.

The table shows the monthly salary (in ₹) of employees in a factory.

Salary (in ₹)	up to 30,000	up to 32,000	up to 34,000	up to 36,000	up to 38,000	up to 40,000
Number of employees	16	28	37	44	47	50

SubQuestion No : 20

Q.20 How many employees have salary more than ₹32000 up to ₹38000?

- Ans
- ☒ A. 21
 - ☒ B. 23
 - ☒ C. 17
 - ☒ D. 19

Question ID : 63068065331

Section : General English 1

Q.1 Select the most appropriate option to fill in the blank.

The game involved whispering some words _____ in the partner's ears.

- Ans
- ☒ A. vastly
 - ☒ B. softly
 - ☒ C. largely
 - ☒ D. widely

Question ID : 63068050781

Q.2 Select the most appropriate option to fill in the blank.

It seemed that her _____ fears were gradually turning out to be true.

- Ans
- ☒ A. worse
 - ☒ B. more worse
 - ☒ C. worst
 - ☒ D. most worst

Question ID : 63068060846

Q.3 Select the most appropriate option to fill in the blank.

Sheila, _____ could not stand the abuse happening in front of her, immediately called the police.

- Ans
- ☒ A. neither
 - ☒ B. who
 - ☒ C. whom
 - ☒ D. whose

Question ID : 63068060855

Q.4 Select the most appropriate meaning of the given proverb.

Absence makes the heart grow fonder.

- Ans
- ☒ A. We feel more affection for those you love when parted from them.
 - ☒ B. We are happy to be absent from others' hearts.
 - ☒ C. We are happy at heart when we can be absent.
 - ☒ D. We love more when the person we love is near.

Question ID : 63068060641

Q.5 Select the most appropriate phrasal verb that can substitute the underlined segment in the given sentence.

I cannot read his handwriting.

- Ans
- ☒ A. make out
 - ☒ B. make up
 - ☒ C. make for
 - ☒ D. make over

Question ID : 63068060631

Q.6 Select the most appropriate synonym of the underlined word.

His colleagues envy him because of his jovial nature.

- Ans
- ☒ A. Gloomy
 - ☒ B. Merry
 - ☒ C. Miserable
 - ☒ D. Desolate

Question ID : 63068067201

Q.7 Select the option that gives the most appropriate meaning of the underlined group of words.

The students got confused by the teacher's second explanation.

- Ans
- ☒ A. angry by
 - ☒ B. happy by
 - ☒ C. Were unable to make sense of
 - ☒ D. felt happy by

Question ID : 63068050282

Q.8 Select the most appropriate synonym of the underlined word.

The ending of the new horror movie baffled the audience

- Ans
- ☒ A. Perplexed
 - ☐ B. Separated
 - ☐ C. Reproached
 - ☐ D. Satisfied

Question ID : 63068067189

Q.9 The following sentence has been split into four segments. Identify the segment that contains a grammatical error.

She will / be hold a vigil / in memory of / the soldiers.

- Ans
- ☐ A. in memory of
 - ☐ B. She will
 - ☐ C. the soldiers.
 - ☒ D. be hold a vigil

Question ID : 63068059223

Q.10 Select the grammatically correct form of the given sentence from the following options.

The association have been requesting the government to give the provision of fixing the fees since 2020.

- Ans
- ☐ A. T he association has being requesting the government to give the provision of fixing the fees since 2020.
 - ☒ B. T he association has been requesting the government to give the provision of fixing the fees since 2020.
 - ☐ C. T he association has requesting the government to give the provision of fixing the fees since 2020.
 - ☐ D. T he association has been request the government to give the provision of fixing the fees since 2020.

Question ID : 63068049392

Q.11 Select the most appropriate option to fill in the blank.

The athlete is determined to _____ the record set by him earlier.

- Ans
- ☐ A. remove
 - ☐ B. open
 - ☒ C. break
 - ☐ D. neglect

Question ID : 63068067183

Q.12 Identify the grammatical error in the following sentence.

Hiten has a pack of keys in his pocket.

- Ans
- ☒ A. Hiten
 - ☒ B. keys
 - ☒ C. pocket
 - ☒ D. pack

Question ID : 63068057656

Q.13 The following sentence has been split into four segments. Identify the segment that contains a grammatical error.

My teacher / is travelling / to Gujarat / by the bus.

- Ans
- ☒ A. by the bus.
 - ☒ B. My teacher
 - ☒ C. to Gujarat
 - ☒ D. is travelling

Question ID : 63068059235

Q.14 Select the most appropriate option to fill in the blanks.

Sanket is _____ university professor and _____ obedient man by nature.

- Ans
- ☒ A. an, a
 - ☒ B. a, a
 - ☒ C. a, an
 - ☒ D. an, an

Question ID : 63068055964

Q.15 The following sentence has been split into four segments. Identify the segment that contains a grammatical error.

I will punishing / you if / you utter / that word again.

- Ans
- ☒ A. I will punishing
 - ☒ B. you if
 - ☒ C. that word again.
 - ☒ D. you utter

Question ID : 63068059221

Q.16 One of the parts of the given sentence contains a punctuation error. Identify the erroneous part and select the option that rectifies this error.

"This is what I ate for breakfast, an orange, an egg and a doughnut ", said Jack.

- Ans
- ☒ A. breakfast:
 - ☒ B. orange;
 - ☒ C. doughnut?
 - ☒ D. Jack:"

Question ID : 63068059305

Q.17 Select the most appropriate option to fill in the blank.

I read _____ mail you had sent me last Wednesday.

- Ans ☒ A. the
☐ B. a
☐ C. No article required
☐ D. an

Question ID : 63068059237

Q.18 Select the most appropriate option to fill in the blank.

At hira's attire was always of the _____ trend.

- Ans ☐ A. most later
☒ B. latest
☐ C. late
☐ D. later

Question ID : 63068049132

Q.19 Select the grammatically correct sentence from among the given options.

- Ans ☐ A. "can I borrow your pen?" asked ben.
☐ B. "Can I borrow your pen." asked Ben.
☒ C. "Can I borrow your pen?", asked Ben.
☐ D. "Can i borrow your pen? asked Ben.

Question ID : 63068064257

Q.20 Select the most appropriate option to fill in the blank.

Lata Mangeshkar is considered to have _____ voice in the musical world of India.

- Ans ☐ A. the sweet
☐ B. the sweeter
☐ C. the most sweetest
☒ D. the sweetest

Question ID : 63068060844

Section : General English 2

Q.1 Select the most appropriate meaning of the given proverb.

An ounce of protection is worth a pound of care.

- Ans ☐ A. A little protection makes cure more expensive.
☐ B. If you protect the ounces the pound will be more worthy.
☒ C. A little bit of precaution is more powerful than the care after.
☐ D. Protection does not make care worthwhile.

Question ID : 63068060642

Q.2 Parts of a sentence are given below in jumbled order. Identify the option that arranges the parts in the correct order to form a meaningful sentence.

Of a country / lack of / economy / on the / infrastructure / a ripple effect / has

- Ans
- ☐ A. Lack of economy of a country has infrastructure on the ripple effect.
 - ☐ B. On the economy of a country a ripple effect has lack of infrastructure.
 - ☐ C. Lack of of a country on the economy infrastructure has a ripple effect.
 - ☒ D. Lack of infrastructure has a ripple effect on the economy of a country.

Question ID : 63068050706

Q.3 Select the option that can be used as a one-word substitute for the given group of words.

Comprehensive skill or knowledge in a particular subject or activity

- Ans
- ☐ A. Flattery
 - ☐ B. Artery
 - ☒ C. Mastery
 - ☐ D. Mockery

Question ID : 63068060867

Q.4 Select the most appropriate pronoun to fill in the blank.

An emoji is a digital sign _____ is used instead of an expression.

- Ans
- ☐ A. it
 - ☐ B. who
 - ☐ C. Itself
 - ☒ D. which

Question ID : 63068060856

Q.5 Parts of a sentence are given below in jumbled order. While the first and the last parts (P1 and P6) are in the correct order, the parts in between are jumbled up. Arrange the parts in the correct order to form a meaningful sentence.

P1. Some schools
P. received the required
Q. may refuse
R. who has not
S. to enrol a child
P6. inoculations.

- Ans
- ☐ A. PQRS
 - ☒ B. QSRP
 - ☐ C. PRSQ
 - ☐ D. QSPR

Question ID : 63068069746

Q.6 Fragments of a sentence are given here. While the first and the last fragment (1 and 6) are in the correct order, the fragments in between are jumbled up. Arrange the fragments in the correct order to form a meaningful and coherent sentence.

- 1. The entire
- M. will not be
- N. of the individual
- O. subjected to tax
- P. global income
- 6. in India.

Ans ☒ A. MNOP
☒ B. PNMO
☒ C. NPOM
☒ D. MPNO

Question ID : 63068067489

Q.7 Fragments of a sentence are given here. While the first and the last fragment (1 and 6) are in the correct order, the fragments in between are jumbled up. Arrange the fragments in the correct order to form a meaningful and coherent sentence.

- 1. Competitive conditions
- M. sector were strengthened
- N. by relaxing entry and exit
- O. in the Indian banking
- P. norms and the increased
- 6. presence of foreign banks.

Ans ☒ A. OMPN
☒ B. PNOM
☒ C. MNOP
☒ D. OMNP

Question ID : 63068067493

Q.8 Parts of a sentence are given below in jumbled order. Arrange the parts in the correct order to form a meaningful sentence.

- A. has a long
- B. history of
- C. this country
- D. athletic excellence

Ans ☒ A. CABD
☒ B. DABC
☒ C. CADB
☒ D. CBAD

Question ID : 63068069763

Q.9 Select the grammatically correct form of the given sentence from the following options.

Savita cut herself while chopping vegetables.

- Ans** ☒ A. Savita cut her while chopping vegetables.
☒ B. Savita cut herself while chopping vegetables.
☒ C. Savita cut themselves while chopping vegetables.
☒ D. Savita cut himself while chopping vegetables.

Question ID : 63068049357

Q.10 Select the correctly spelt word.

- Ans** ☒ A. Municipality
☒ B. Municipalty
☒ C. Muncipaility
☒ D. Munnicipality

Question ID : 63068068224

Comprehension:

Read the following passage carefully and answer the given questions.

By now I had been three years in South Africa. I had got to know the people and they had got to know me. In 1896, I asked permission to go home for six months, for I saw that I was in for a long stay there. I had established a fairly good practice, and could see that people felt the need of my presence. So I made up my mind to go home, fetch my wife and children, and then return and settle out there. I also saw that, if I went home, I might be able to do there some public work by educating public opinion and creating more interest in the Indians of South Africa. The £3 tax was an open sore. There could be no peace until it was abolished.

But who was to take charge of the Congress work and Education Society in my absence? I could think of two men – Adamji Miyakhan and Parsi Rustomji. There were many workers now available from the commercial class. But the foremost among those who could fulfill the duties of the secretary by regular work, and who also commanded the regard of the Indian community, were these two. The secretary certainly needed a working knowledge of English. I recommended the late Adamji Miyakhan's name to the Congress, and it approved of his appointment as secretary. Experience showed that the choice was a very happy one.

Adamji Miyakhan satisfied all with his perseverance, liberality, amiability and courtesy, and proved to everyone that the secretary's work did not require a man with a barrister's degree or high English education.

SubQuestion No : 11

Q.11 In the context of the passage, what did the writer think about Adamji Miyakhan and Parsi Rustomji?

- Ans** ☒ A. That they could take charge of Congress work and Education Society in his absence
☒ B. That they could take charge of foreign affairs in his absence
☒ C. That they could take charge of revolutionary activities in his absence
☒ D. That they could take charge of his legal activities in his absence

Question ID : 63068071999

Comprehension:

Read the following passage carefully and answer the given questions.

By now I had been three years in South Africa. I had got to know the people and they had got to know me. In 1896, I asked permission to go home for six months, for I saw that I was in for a long stay there. I had established a fairly good practice, and could see that people felt the need of my presence. So I made up my mind to go home, fetch my wife and children, and then return and settle out there. I also saw that, if I went home, I might be able to do there some public work by educating public opinion and creating more interest in the Indians of South Africa. The £3 tax was an open sore. There could be no peace until it was abolished.

But who was to take charge of the Congress work and Education Society in my absence? I could think of two men – Adamji Miyakhan and Parsi Rustomji. There were many workers now available from the commercial class. But the foremost among those who could fulfill the duties of the secretary by regular work, and who also commanded the regard of the Indian community, were these two. The secretary certainly needed a working knowledge of English. I recommended the late Adamji Miyakhan's name to the Congress, and it approved of his appointment as secretary. Experience showed that the choice was a very happy one.

Adamji Miyakhan satisfied all with his perseverance, liberality, amiability and courtesy, and proved to everyone that the secretary's work did not require a man with a barrister's degree or high English education.

SubQuestion No : 12

Q.12 In the context of the passage, what did the author consider to be an open sore?

- Ans ☒ A. Three pound tax
☐ B. Corruption
☐ C. Nepotism
☐ D. Slavery

Question ID : 63068071998

Comprehension:

Read the following passage carefully and answer the given questions.

By now I had been three years in South Africa. I had got to know the people and they had got to know me. In 1896, I asked permission to go home for six months, for I saw that I was in for a long stay there. I had established a fairly good practice, and could see that people felt the need of my presence. So I made up my mind to go home, fetch my wife and children, and then return and settle out there. I also saw that, if I went home, I might be able to do there some public work by educating public opinion and creating more interest in the Indians of South Africa. The £3 tax was an open sore. There could be no peace until it was abolished.

But who was to take charge of the Congress work and Education Society in my absence? I could think of two men – Adamji Miyakhan and Parsi Rustomji. There were many workers now available from the commercial class. But the foremost among those who could fulfill the duties of the secretary by regular work, and who also commanded the regard of the Indian community, were these two. The secretary certainly needed a working knowledge of English. I recommended the late Adamji Miyakhan's name to the Congress, and it approved of his appointment as secretary. Experience showed that the choice was a very happy one.

Adamji Miyakhan satisfied all with his perseverance, liberality, amiability and courtesy, and proved to everyone that the secretary's work did not require a man with a barrister's degree or high English education.

SubQuestion No : 13

Q.13 Which word is synonymous with the word 'amiability'?

- Ans ☐ A. Animosity
☐ B. Treachery
☐ C. Crookedness
☒ D. Cordiality

Question ID : 63068072001

Comprehension:

Read the following passage carefully and answer the given questions.

By now I had been three years in South Africa. I had got to know the people and they had got to know me. In 1896, I asked permission to go home for six months, for I saw that I was in for a long stay there. I had established a fairly good practice, and could see that people felt the need of my presence. So I made up my mind to go home, fetch my wife and children, and then return and settle out there. I also saw that, if I went home, I might be able to do there some public work by educating public opinion and creating more interest in the Indians of South Africa. The £3 tax was an open sore. There could be no peace until it was abolished.

But who was to take charge of the Congress work and Education Society in my absence? I could think of two men – Adamji Miyakhan and Parsi Rustomji. There were many workers now available from the commercial class. But the foremost among those who could fulfill the duties of the secretary by regular work, and who also commanded the regard of the Indian community, were these two. The secretary certainly needed a working knowledge of English. I recommended the late Adamji Miyakhan's name to the Congress, and it approved of his appointment as secretary. Experience showed that the choice was a very happy one.

Adamji Miyakhan satisfied all with his perseverance, liberality, amiability and courtesy, and proved to everyone that the secretary's work did not require a man with a barrister's degree or high English education.

SubQuestion No : 14

Q.14 The writer recommend to the Congress the appointment of Adamji Miyakhani as:

- Ans ☒ A. Barrister
☒ B. President of Congress
☒ C. Secretary
☒ D. Foreign Secretary

Question ID : 63068072000

Comprehension:

Read the following passage carefully and answer the given questions.

By now I had been three years in South Africa. I had got to know the people and they had got to know me. In 1896, I asked permission to go home for six months, for I saw that I was in for a long stay there. I had established a fairly good practice, and could see that people felt the need of my presence. So I made up my mind to go home, fetch my wife and children, and then return and settle out there. I also saw that, if I went home, I might be able to do there some public work by educating public opinion and creating more interest in the Indians of South Africa. The £3 tax was an open sore. There could be no peace until it was abolished.

But who was to take charge of the Congress work and Education Society in my absence? I could think of two men – Adamji Miyakhan and Parsi Rustomji. There were many workers now available from the commercial class. But the foremost among those who could fulfill the duties of the secretary by regular work, and who also commanded the regard of the Indian community, were these two. The secretary certainly needed a working knowledge of English. I recommended the late Adamji Miyakhan's name to the Congress, and it approved of his appointment as secretary. Experience showed that the choice was a very happy one.

Adamji Miyakhan satisfied all with his perseverance, liberality, amiability and courtesy, and proved to everyone that the secretary's work did not require a man with a barrister's degree or high English education.

SubQuestion No : 15

Q.15 In the context of the passage, what did the writer decide to do in 1896?

- Ans ☒ A. Leave South Africa forever
☒ B. Stay in South Africa forever
☒ C. Go back home forever
☒ D. Go home for six months

Question ID : 63068071997

Comprehension:

Read the following passage carefully and answer the given questions.

Now a days, too many parents are incapable of saying no. As a consequence, they end up raising 'children' who are oblivious to the commercials targeted directly at them. Even obtaining what they desire does not appease certain children; they crave more. An increasing number of psychologists, academics, and caregivers believe it is time to put an end to the chaos and begin educating children about the values that matter most: hard work, happiness, truthfulness, and empathy. The fight to establish boundaries has never been more difficult—or the consequences heavier. A recent study of individuals who were overindulged as children offers a bleak picture of their future: when youngsters are given something too quickly, they develop into adults who struggle to cope with life's challenges. Additionally, they have a skewed sense of entitlement, which obstructs their success in the workplace and in relationships.

SubQuestion No : 16

Q.16 Read the given passage and select the ANTONYM for the word 'APPEASE'.

- Ans ☒ A. Enrage
 ☐ B. Pacify
 ☐ C. Aggravate
 ☐ D. Arouse

Question ID : 63068072193

Comprehension:

Read the following passage carefully and answer the given questions.

Now a days, too many parents are incapable of saying no. As a consequence, they end up raising 'children' who are oblivious to the commercials targeted directly at them. Even obtaining what they desire does not appease certain children; they crave more. An increasing number of psychologists, academics, and caregivers believe it is time to put an end to the chaos and begin educating children about the values that matter most: hard work, happiness, truthfulness, and empathy. The fight to establish boundaries has never been more difficult—or the consequences heavier. A recent study of individuals who were overindulged as children offers a bleak picture of their future: when youngsters are given something too quickly, they develop into adults who struggle to cope with life's challenges. Additionally, they have a skewed sense of entitlement, which obstructs their success in the workplace and in relationships.

SubQuestion No : 17

Q.17 What should be the most appropriate title of the passage?

- Ans ☐ A. Future of Our Generation
 ☒ B. Parenting and Problems
 ☐ C. Vision of Children
 ☐ D. Values and Ethics of Parents

Question ID : 63068072190

Comprehension:

Read the following passage carefully and answer the given questions.

Now a days, too many parents are incapable of saying no. As a consequence, they end up raising 'children' who are oblivious to the commercials targeted directly at them. Even obtaining what they desire does not appease certain children; they crave more. An increasing number of psychologists, academics, and caregivers believe it is time to put an end to the chaos and begin educating children about the values that matter most: hard work, happiness, truthfulness, and empathy. The fight to establish boundaries has never been more difficult—or the consequences heavier. A recent study of individuals who were overindulged as children offers a bleak picture of their future: when youngsters are given something too quickly, they develop into adults who struggle to cope with life's challenges. Additionally, they have a skewed sense of entitlement, which obstructs their success in the workplace and in relationships.

SubQuestion No : 18

Q.18 Mention two values that children should imbibe in their life.

- Ans ☒ A. Value and morality
- ☒ B. Truthfulness and empathy
- ☒ C. Greed and hypocrisy
- ☒ D. Learning and leadership

Question ID : 63068072191

Comprehension:

Read the following passage carefully and answer the given questions.

Now a days, too many parents are incapable of saying no. As a consequence, they end up raising 'children' who are oblivious to the commercials targeted directly at them. Even obtaining what they desire does not appease certain children; they crave more. An increasing number of psychologists, academics, and caregivers believe it is time to put an end to the chaos and begin educating children about the values that matter most: hard work, happiness, truthfulness, and empathy. The fight to establish boundaries has never been more difficult—or the consequences heavier. A recent study of individuals who were overindulged as children offers a bleak picture of their future: when youngsters are given something too quickly, they develop into adults who struggle to cope with life's challenges. Additionally, they have a skewed sense of entitlement, which obstructs their success in the workplace and in relationships.

SubQuestion No : 19

Q.19 Read the given passage and select the synonym for the word 'OBSTRUCT'.

- Ans ☒ A. Block
- ☒ B. Closed
- ☒ C. Merry
- ☒ D. Revoke

Question ID : 63068072192

Comprehension:

Read the following passage carefully and answer the given questions.

Now a days, too many parents are incapable of saying no. As a consequence, they end up raising 'children' who are oblivious to the commercials targeted directly at them. Even obtaining what they desire does not appease certain children; they crave more. An increasing number of psychologists, academics, and caregivers believe it is time to put an end to the chaos and begin educating children about the values that matter most: hard work, happiness, truthfulness, and empathy. The fight to establish boundaries has never been more difficult—or the consequences heavier. A recent study of individuals who were overindulged as children offers a bleak picture of their future: when youngsters are given something too quickly, they develop into adults who struggle to cope with life's challenges. Additionally, they have a skewed sense of entitlement, which obstructs their success in the workplace and in relationships.

SubQuestion No : 20

Q.20 What type of passage is it ?

- Ans ☒ A. Irrational
☒ B. Analytical
☒ C. Didactical
☒ D. Illogical

Question ID : 63068072189

Section : General Hindi 1

Q.1 "कविता" शब्द का बहुवचन शब्द बताइए।

- Ans ☒ A. कहानियां
☒ B. कथाएं
☒ C. उपन्यासों
☒ D. कविताएं

Question ID : 63068064612

Q.2 रिक्त स्थान में उचित शब्द की पूर्ति कीजिये।

यह काम _____ कोई नहीं कर सकता।

- Ans ☒ A. राम
☒ B. बैल
☒ C. वे
☒ D. हर

Question ID : 63068056070

Q.3 निम्नलिखित में से किस वाक्य में 'संभाव्य वर्तमान' काल है?

- Ans ☒ A. नगर में एक साधु आए हैं।
☒ B. सूर्य पूर्व में उदित होता है।
☒ C. मुझे डर है कि कहीं कोई देखता न हो।
☒ D. अभी पानी बरसता है।

Question ID : 63068055640

Q.4 निम्नलिखित वाक्यांश के लिए सार्थक शब्द का चयन कीजिए-
वृष्टि का अभाव होना।

- Ans ☒ A. अनावृष्टि
☒ B. ओला वृष्टि
☒ C. क्षीणवृष्टि
☒ D. अतिवृष्टि

Question ID : 63068055602

Q.5 विराम चिन्ह के आधार पर कौन-सा वाक्य शुद्ध है?

- Ans ☒ A. ऐसा एक भी मनुष्य नहीं जो संसार में कुछ-न-कुछ लाभकारी कार्य न कर सकता हो?
☒ B. ऐसा एक भी मनुष्य नहीं जो संसार में कुछ-न-कुछ लाभकारी कार्य न कर सकता हो;
☒ C. ऐसा एक भी मनुष्य नहीं जो संसार में कुछ-न-कुछ लाभकारी कार्य न कर सकता हो!
☒ D. ऐसा एक भी मनुष्य नहीं जो संसार में कुछ-न-कुछ लाभकारी कार्य न कर सकता हो।

Question ID : 63068061102

Q.6 न रहेगा बांस न बजेगी बांसुरी' का उपयुक्त अर्थ है।

- Ans ☒ A. समझौता होना
☒ B. न कारण होगा, न कार्य होगा
☒ C. सफल होना
☒ D. सब नष्ट हो जाना

Question ID : 63068060754

Q.7 प्रश्न के लिए उचित शब्द का चयन कीजिये।

विवाह में कन्या पक्ष के लोगों को कहा जाता है।

- Ans ☒ A. अतिथि
☒ B. घराती
☒ C. बाराती
☒ D. महमान

Question ID : 63068061035

Q.8 निम्नलिखित में से किस विकल्प में विशेषण नहीं है?

- Ans ☒ A. रंगीन कागज
☒ B. कौन आदमी
☒ C. गोरा लड़का
☒ D. थोड़ा दूध

Question ID : 63068060701

Q.9 क्रिया विशेषण शब्द होते है।

- Ans ☒ A. क्रिया और विशेषण दोनों का मेल करने वाले
- ☒ B. क्रिया की विशेषता बताने वाले
- ☒ C. संज्ञा या सर्वनाम का वाक्य के अन्य शब्दों से सम्बन्ध बताने वाले
- ☒ D. दो क्रियाओं को आपस में जोड़ने वाले

Question ID : 63068060696

Q.10 निम्नलिखित में से एक पुल्लिंग है ?

- Ans ☒ A. पुस्तक
- ☒ B. आदमी
- ☒ C. लड़की
- ☒ D. स्त्री

Question ID : 63068064648

Q.11 नीचे दिए विकल्पों में से 'नाक का बाल' मुहावरे का सही अर्थ चुनिए।

- Ans ☒ A. बेइज्जती
- ☒ B. निर्लज्ज
- ☒ C. घनिष्ठ मित्र
- ☒ D. घृणा करना

Question ID : 63068065787

Q.12 कुली किस भाषा का शब्द है ?

- Ans ☒ A. अरबी
- ☒ B. पुर्तगाली
- ☒ C. फारसी
- ☒ D. तुर्की

Question ID : 63068055844

Q.13 दिए गये वाक्यों में से कौन सा मिश्र वाक्य है।

- Ans ☒ A. आज शाम उससे मिलने का मेरा विचार है।
- ☒ B. मेरे लिए बैठने की कहीं जगह नहीं।
- ☒ C. यहाँ जो प्रबंध है वह अति त्रुटिपूर्ण है।
- ☒ D. यहाँ का प्रबंध अति त्रुटिपूर्ण है।

Question ID : 63068060970

Q.14 कूप शब्द का तद्भव है:

- Ans ☒ A. किताब
- ☒ B. कूड़ा
- ☒ C. कुहरा
- ☒ D. कुआँ

Question ID : 63068055829

Q.15 उपसर्ग का प्रयोग कहाँ किया जाता है?

- Ans
- ☐ A. शब्द के आदि और अंत में
 - ☐ B. शब्द के अंत में
 - ☒ C. शब्द के आदि में
 - ☐ D. शब्द के मध्य में

Question ID : 63068066928

Q.16 भूतकाल की दृष्टि से दिए गए वाक्य के किस भाग में त्रुटि है-

बहुत पहले मैंने देखी है, किताब वहीं मेज़ पर थी।

- Ans
- ☒ A. मैंने देखी है,
 - ☐ B. मेज़ पर थी।
 - ☐ C. किताब वहीं
 - ☐ D. बहुत पहले

Question ID : 63068060918

Q.17 उचित सर्वनाम की पूर्ति कीजिये।

इतनी सुबह सुबह _____ कहां जा रहे हो?

- Ans
- ☐ A. वे
 - ☐ B. हम
 - ☐ C. यह
 - ☒ D. तुम

Question ID : 63068056118

Q.18 निम्नलिखित में से कौन सी धातु का नाम लिंग की दृष्टि से अपवाद है?

- Ans
- ☐ A. सोना
 - ☐ B. एल्यूमिनियम
 - ☐ C. यूरेनियम
 - ☒ D. चाँदी

Question ID : 63068062392

Q.19 'युद्ध होने से गोलियाँ चलतीं।' इस वाक्य में हेतु-हेतु मद्भूतकाल का प्रयोग कर वाक्य पूर्ण कीजिए।

- Ans
- ☐ A. युद्ध होता था तो गोलियाँ चलती थीं।
 - ☐ B. युद्ध होगा तो गोलियाँ चलेंगी।
 - ☐ C. युद्ध होने से गोलियाँ चलती थीं।
 - ☒ D. युद्ध होता तो गोलियाँ चलतीं।

Question ID : 63068056026

Q.20 क्रोध चाहे जैसा भी हो, मनुष्य को _____ बनाता है। इस अपूर्ण वाक्य को किस शब्द के उचित प्रयोग से पूर्ण वाक्य में बदला जा सकता है?

- Ans
- ☒ A. सबल
 - ☒ B. कायर
 - ☒ C. क्रोधी
 - ☒ D. दुर्बल

Question ID : 63068066733

Section : General Hindi 2

Q.1 सन्धि-विच्छेद 'आत्मन् + ज्ञान' की सन्धि से निर्मित सही शब्द का चयन कीजिए-

- Ans
- ☒ A. आत्मेतज्ञान
 - ☒ B. आत्मज्ञान
 - ☒ C. आत्मन्ज्ञान
 - ☒ D. आत्माज्ञान

Question ID : 63068062363

Q.2 'इतः + ततः' की सन्धि कीजिये-

- Ans
- ☒ A. इतष्टतः
 - ☒ B. इतस्ततः
 - ☒ C. इतोततः
 - ☒ D. इतःततः

Question ID : 63068062360

Q.3 दिल्ली का पौराणिक नाम _____ है।

- Ans
- ☒ A. डेली
 - ☒ B. हस्तीपुर
 - ☒ C. देहली
 - ☒ D. हस्तिनापुर

Question ID : 63068063001

Q.4 अवलम्ब- अविलंब का सही शब्द-युग्म चुनें?

- Ans
- ☒ A. तुरंत-घर
 - ☒ B. कृपा-मूल्य
 - ☒ C. आकाश-शीघ्र
 - ☒ D. सहारा-शीघ्र

Question ID : 63068065715

Q.5 निम्नलिखित में से एक वाक्य दिगन्तराल बहुव्रीहि समास का नहीं है?

- Ans ☒ A. दक्षिणपूर्व-दक्षिण और पूर्व के मध्य है जो वह –अम्निकोण
☒ B. पश्चिमोत्तर-पश्चिम और उत्तर के मध्य है जो वह-वायुकोण
☒ C. पूर्वोत्तर-पूर्व और उत्तर के मध्य है जो वह-ईशानकोण
☒ D. सजल-जल के साथ है जो वह

Question ID : 63068064630

Q.6 अग्नि, आग और पावक का सर्वाधिक उपयुक्त पर्यायवाची है -

- Ans ☒ A. अनुज
☒ B. अम्बर
☒ C. अनल
☒ D. अनिल

Question ID : 63068060757

Q.7 नलिन, पुंडरीक इन पर्यायवाची शब्दों का अर्थ है -

- Ans ☒ A. कोयल
☒ B. सुकुमार
☒ C. कलिका
☒ D. कमल

Question ID : 63068056136

Q.8 रिक्त स्थान में उचित शब्द की पूर्ति कीजिये।

मां _____ बालक रोता है।

- Ans ☒ A. के बिना
☒ B. लगाऊंगी
☒ C. रोता
☒ D. वहां

Question ID : 63068055787

Q.9 निम्नलिखित में से एक वाक्य व्यतिहार बहुव्रीहि समास का नहीं है ?

- Ans ☒ A. मुक्कामुक्की-मुक्कों से जो लड़ाई हुई
☒ B. गालामाली-गालियों से जो झगडा हुआ
☒ C. लाठालाठी-लाठियों से जो लड़ाई हुई
☒ D. घर-द्वार-घर-द्वार वगैरह(परिवार के अर्थ में)

Question ID : 63068064636

Q.10 'सम् + गम्' का संधि शब्द है-

- Ans ☒ A. संयोग
☒ B. समगम
☒ C. संगम
☒ D. समागम

Question ID : 63068061014

Comprehension:

निम्नलिखित गद्यांश को पढ़ें और प्रश्न का उत्तर दें:

शैलेंद्र ने राजकपूर की भावनाओं को शब्द दिए हैं। राजकपूर ने अपने अनन्य सहयोगी की फिल्म में उतनी ही तन्मयता के साथ काम किया, किसी पारिश्रमिक की अपेक्षा किए बगैर। शैलेंद्रने लिखा था कि वे राजकपूर के पास 'तीसरी कसम' की कहानी सुनाने पहुँचे तो कहानी सुनकर उन्होंने बड़े उत्साहपूर्वक काम करना स्वीकार कर लिया। पर तुरंत गंभीरतापूर्वक बोले- "मेरा पारिश्रमिक एडवांस देना होगा।" शैलेंद्र को ऐसी उम्मीद नहीं थी कि राजकपूर जिंदगी-भर की दोस्ती का ये बदला देंगे। शैलेंद्र का मुरझाया हुआ चेहरा देखकर राजकपूर ने मुसकराते हुए कहा, "निकालो एक रुपया, मेरा पारिश्रमिक! पूरा एडवांस।" शैलेंद्र राजकपूर की इस याराना मस्ती से परिचित तो थे, लेकिन एक निर्माता के रूप में बड़े व्यावसायिक सूझबूझ वाले भी चक्कर खा जाते हैं, फिरशैलेंद्र तो फिल्म-निर्माता बनने के लिए सर्वथा अयोग्य थे। राजकपूर ने एक अच्छे और सच्चे मित्र की हैसियत से शैलेंद्र को फिल्म की असफलता के खतरों से आगाह भी किया। पर वह तो एक आदर्शवादी भावुक कवि था, जिसे अपार संपत्ति और यश तक की इतनी कामना नहीं थी जितनीआत्म-संतुष्टि के सुख की अभिलाषा थी।

SubQuestion No : 11

Q.11 शैलेंद्र को किस बात की अभिलाषा थी?

- Ans ☒ A. बड़े व्यापार की
☒ B. आत्म-संतुष्टि के सुख की
☒ C. बड़े नाम की
☒ D. अपार धन की

Question ID : 63068060998

Comprehension:

निम्नलिखित गद्यांश को पढ़ें और प्रश्न का उत्तर दें:

शैलेंद्र ने राजकपूर की भावनाओं को शब्द दिए हैं। राजकपूर ने अपने अनन्य सहयोगी की फिल्म में उतनी ही तन्मयता के साथ काम किया, किसी पारिश्रमिक की अपेक्षा किए बगैर। शैलेंद्रने लिखा था कि वे राजकपूर के पास 'तीसरी कसम' की कहानी सुनाने पहुँचे तो कहानी सुनकर उन्होंने बड़े उत्साहपूर्वक काम करना स्वीकार कर लिया। पर तुरंत गंभीरतापूर्वक बोले- "मेरा पारिश्रमिक एडवांस देना होगा।" शैलेंद्र को ऐसी उम्मीद नहीं थी कि राजकपूर जिंदगी-भर की दोस्ती का ये बदला देंगे। शैलेंद्र का मुरझाया हुआ चेहरा देखकर राजकपूर ने मुसकराते हुए कहा, "निकालो एक रुपया, मेरा पारिश्रमिक! पूरा एडवांस।" शैलेंद्र राजकपूर की इस याराना मस्ती से परिचित तो थे, लेकिन एक निर्माता के रूप में बड़े व्यावसायिक सूझबूझ वाले भी चक्कर खा जाते हैं, फिरशैलेंद्र तो फिल्म-निर्माता बनने के लिए सर्वथा अयोग्य थे। राजकपूर ने एक अच्छे और सच्चे मित्र की हैसियत से शैलेंद्र को फिल्म की असफलता के खतरों से आगाह भी किया। पर वह तो एक आदर्शवादी भावुक कवि था, जिसे अपार संपत्ति और यश तक की इतनी कामना नहीं थी जितनीआत्म-संतुष्टि के सुख की अभिलाषा थी।

SubQuestion No : 12

Q.12 "निकालो एक रुपया, मेरा पारिश्रमिक! पूरा एडवांस।"- यह कथन मुसकराते हुए किसने कहा?

- Ans ☒ A. राजकपूर ने
☒ B. एक व्यापारी ने
☒ C. शैलेंद्र ने
☒ D. बच्चे ने

Question ID : 63068060996

Comprehension:

निम्नलिखित गद्यांश को पढ़ें और प्रश्न का उत्तर दें:

शैलेंद्र ने राजकपूर की भावनाओं को शब्द दिए हैं। राजकपूर ने अपने अनन्य सहयोगी की फिल्म में उतनी ही तन्मयता के साथ काम किया, किसी पारिश्रमिक की अपेक्षा किए बगैर। शैलेंद्रने लिखा था कि वे राजकपूर के पास 'तीसरी कसम' की कहानी सुनाने पहुँचे तो कहानी सुनकर उन्होंने बड़े उत्साहपूर्वक काम करना स्वीकार कर लिया। पर तुरंत गंभीरतापूर्वक बोले- "मेरा पारिश्रमिक एडवांस देना होगा।" शैलेंद्र को ऐसी उम्मीद नहीं थी कि राजकपूर जिंदगी-भर की दोस्ती का ये बदला देंगे। शैलेंद्र का मुरझाया हुआ चेहरा देखकर राजकपूर ने मुसकराते हुए कहा, "निकालो एक रुपया, मेरा पारिश्रमिक! पूरा एडवांस।" शैलेंद्र राजकपूर की इस याराना मस्ती से परिचित तो थे, लेकिन एक निर्माता के रूप में बड़े व्यावसायिक सूझबूझ वाले भी चक्कर खा जाते हैं, फिर शैलेंद्र तो फिल्म-निर्माता बनने के लिए सर्वथा अयोग्य थे। राजकपूर ने एक अच्छे और सच्चे मित्र की हैसियत से शैलेंद्र को फिल्म की असफलता के खतरों से आगाह भी किया। पर वह तो एक आदर्शवादी भावुक कवि था, जिसे अपार संपत्ति और यश तक की इतनी कामना नहीं थी जितनी आत्म-संतुष्टि के सुख की अभिलाषा थी।

SubQuestion No : 13

Q.13 राजकपूर ने शैलेंद्र को किस खतरे से आगाह किया?

- Ans ☒ A. धन की हानि के
☒ B. कहानी लिखने के
☒ C. फिल्म की असफलता के
☒ D. व्यापार के

Question ID : 63068060997

Comprehension:

निम्नलिखित गद्यांश को पढ़ें और प्रश्न का उत्तर दें:

शैलेंद्र ने राजकपूर की भावनाओं को शब्द दिए हैं। राजकपूर ने अपने अनन्य सहयोगी की फिल्म में उतनी ही तन्मयता के साथ काम किया, किसी पारिश्रमिक की अपेक्षा किए बगैर। शैलेंद्रने लिखा था कि वे राजकपूर के पास 'तीसरी कसम' की कहानी सुनाने पहुँचे तो कहानी सुनकर उन्होंने बड़े उत्साहपूर्वक काम करना स्वीकार कर लिया। पर तुरंत गंभीरतापूर्वक बोले- "मेरा पारिश्रमिक एडवांस देना होगा।" शैलेंद्र को ऐसी उम्मीद नहीं थी कि राजकपूर जिंदगी-भर की दोस्ती का ये बदला देंगे। शैलेंद्र का मुरझाया हुआ चेहरा देखकर राजकपूर ने मुसकराते हुए कहा, "निकालो एक रुपया, मेरा पारिश्रमिक! पूरा एडवांस।" शैलेंद्र राजकपूर की इस याराना मस्ती से परिचित तो थे, लेकिन एक निर्माता के रूप में बड़े व्यावसायिक सूझबूझ वाले भी चक्कर खा जाते हैं, फिर शैलेंद्र तो फिल्म-निर्माता बनने के लिए सर्वथा अयोग्य थे। राजकपूर ने एक अच्छे और सच्चे मित्र की हैसियत से शैलेंद्र को फिल्म की असफलता के खतरों से आगाह भी किया। पर वह तो एक आदर्शवादी भावुक कवि था, जिसे अपार संपत्ति और यश तक की इतनी कामना नहीं थी जितनी आत्म-संतुष्टि के सुख की अभिलाषा थी।

SubQuestion No : 14

Q.14 'पारिश्रमिक' का पर्यायवाची शब्द है-

- Ans ☒ A. उत्साहवर्धन
☒ B. उन्नति
☒ C. पुरस्कार
☒ D. मेहनताना

Question ID : 63068060999

Comprehension:

निम्नलिखित गद्यांश को पढ़ें और प्रश्न का उत्तर दें:

शैलेंद्र ने राजकपूर की भावनाओं को शब्द दिए हैं। राजकपूर ने अपने अनन्य सहयोगी की फिल्म में उतनी ही तन्मयता के साथ काम किया, किसी पार्श्वमिक की अपेक्षा किए बगैर। शैलेंद्रने लिखा था कि वे राजकपूर के पास 'तीसरी कसम' की कहानी सुनाने पहुँचे तो कहानी सुनकर उन्होंने बड़े उत्साहपूर्वक काम करना स्वीकार कर लिया। पर तुरंत गंभीरतापूर्वक बोले- "मेरा पार्श्वमिक एडवांस देना होगा।" शैलेंद्र को ऐसी उम्मीद नहीं थी कि राजकपूर जिंदगी-भर की दोस्ती का ये बदला देंगे। शैलेंद्र का मुरझाया हुआ चेहरा देखकर राजकपूर ने मुसकराते हुए कहा, "निकालो एक रुपया, मेरा पार्श्वमिक! पूरा एडवांस।" शैलेंद्र राजकपूर की इस याराना मस्ती से परिचित तो थे, लेकिन एक निर्माता के रूप में बड़े व्यावसायिक सूझबूझ वाले भी चक्कर खा जाते हैं, फिरशैलेंद्र तो फिल्म-निर्माता बनने के लिए सर्वथा अयोग्य थे। राजकपूर ने एक अच्छे और सच्चे मित्र की हैसियत से शैलेंद्र को फिल्म की असफलता के खतरों से आगाह भी किया। पर वह तो एक आदर्शवादी भावुक कवि था, जिसे अपार संपत्ति और यश तक की इतनी कामना नहीं थी जितनीआत्म-संतुष्टि के सुख की अभिलाषा थी।

SubQuestion No : 15

Q.15 गद्यांश के अनुसार राजकपूर के अनन्य सहयोगी कौन थे?

- Ans ☒ A. एक व्यापारी
☒ B. महेंद्र
☒ C. शैलेंद्र
☒ D. प्रह्लाद अग्रवाल

Question ID : 63068060995

Comprehension:

निम्नलिखित गद्यांश को पढ़ें और प्रश्न का उत्तर दें:

वर्तमान समय में 'धर्म' शब्द का जिस अर्थ में प्रयोग किया जाता है उसका वास्तविक धर्म से कोई संबंध नहीं है। 'धर्म' का वास्तविक तात्पर्य है ऐसा आचरण अथवा कर्म जिससे मानव का विकास संभव होता है। यही आचरण नैतिक अथवा मानवोचित आचरण भी कहलाता है। भारत के आदि ऋषि-मुनियों ने धर्म का उल्लेख करते समय न तो लोक-परलोक की बात की है, न जाति अथवा समुदाय की और न ही व्यवसायगत भेदभाव की। एक सामान्य जनहित की दृष्टि से धर्म की व्याख्या की गई जिसका प्रमाण है - "परहित सरिस धर्म नहिं भाई। पर पीड़ा सम नहिं अधमाई।" उनके अनुसार मानव मात्र का एक ही धर्म है और वह है — मानवता। परंतु आजकल 'धर्म' शब्द का प्रयोग पंथ, संप्रदाय, मत आदि के लिए किया जाता है। यह धर्म का संस्थागत रूप है। जब कोई व्यक्ति वास्तविक धर्म की भावना से प्रेरित होकर राजनीति में प्रवेश करता है और राजकार्य चलाता है, तो कहा जाता है कि वह राजधर्म का पालन कर रहा है अथवा धर्म की राजनीति कर रहा है। कदाचित यही धार्मिक राजनीति गाँधी जी द्वारा प्रस्तावित नैतिक राजनीति है।

SubQuestion No : 16

Q.16 उपर्युक्त गद्यांश में प्रयोग किए गए "धर्म" शब्द का पर्यायवाची शब्द क्या है?

- Ans ☒ A. मार्ग
☒ B. सड़क
☒ C. जाति
☒ D. पगडंडी

Question ID : 63068071651

Comprehension:

निम्नलिखित गद्यांश को पढ़ें और प्रश्न का उत्तर दें:

वर्तमान समय में 'धर्म' शब्द का जिस अर्थ में प्रयोग किया जाता है उसका वास्तविक धर्म से कोई संबंध नहीं है। 'धर्म' का वास्तविक तात्पर्य है ऐसा आचरण अथवा कर्म जिससे मानव का विकास संभव होता है। यही आचरण नैतिक अथवा मानवोचित आचरण भी कहलाता है। भारत के आदि ऋषि-मुनियों ने धर्म का उल्लेख करते समय न तो लोक-परलोक की बात की है, न जाति अथवा समुदाय की और न ही व्यवसायगत भेदभाव की। एक सामान्य जनहित की दृष्टि से धर्म की व्याख्या की गई जिसका प्रमाण है - "परहित सरिस धर्म नहिं भाई। पर पीड़ा सम नहिं अधमाई।" उनके अनुसार मानव मात्र का एक ही धर्म है और वह है — मानवता।

परंतु आजकल 'धर्म' शब्द का प्रयोग पंथ, संप्रदाय, मत आदि के लिए किया जाता है। यह धर्म का संस्थागत रूप है। जब कोई व्यक्ति वास्तविक धर्म की भावना से प्रेरित होकर राजनीति में प्रवेश करता है और राजकार्य चलाता है, तो कहा जाता है कि वह राजधर्म का पालन कर रहा है अथवा धर्म की राजनीति कर रहा है। कदाचित यही धार्मिक राजनीति गाँधी जी द्वारा प्रस्तावित नैतिक राजनीति है।

SubQuestion No : 17

Q.17 दिए गए अपठित गद्यांश में प्रयुक्त "आचरण" शब्द का विलोम शब्द क्या है?

- Ans ☒ A. चरित्रवान
☒ B. आचरण सहित
☒ C. अनाचरण
☒ D. सदाचरण

Question ID : 63068071653

Comprehension:

निम्नलिखित गद्यांश को पढ़ें और प्रश्न का उत्तर दें:

वर्तमान समय में 'धर्म' शब्द का जिस अर्थ में प्रयोग किया जाता है उसका वास्तविक धर्म से कोई संबंध नहीं है। 'धर्म' का वास्तविक तात्पर्य है ऐसा आचरण अथवा कर्म जिससे मानव का विकास संभव होता है। यही आचरण नैतिक अथवा मानवोचित आचरण भी कहलाता है। भारत के आदि ऋषि-मुनियों ने धर्म का उल्लेख करते समय न तो लोक-परलोक की बात की है, न जाति अथवा समुदाय की और न ही व्यवसायगत भेदभाव की। एक सामान्य जनहित की दृष्टि से धर्म की व्याख्या की गई जिसका प्रमाण है - "परहित सरिस धर्म नहिं भाई। पर पीड़ा सम नहिं अधमाई।" उनके अनुसार मानव मात्र का एक ही धर्म है और वह है — मानवता।

परंतु आजकल 'धर्म' शब्द का प्रयोग पंथ, संप्रदाय, मत आदि के लिए किया जाता है। यह धर्म का संस्थागत रूप है। जब कोई व्यक्ति वास्तविक धर्म की भावना से प्रेरित होकर राजनीति में प्रवेश करता है और राजकार्य चलाता है, तो कहा जाता है कि वह राजधर्म का पालन कर रहा है अथवा धर्म की राजनीति कर रहा है। कदाचित यही धार्मिक राजनीति गाँधी जी द्वारा प्रस्तावित नैतिक राजनीति है।

SubQuestion No : 18

Q.18 दिए गए गद्यांश को पढ़कर उसका निष्कर्ष अंकित कीजिए।

- Ans ☒ A. धर्म का वास्तविक अर्थ सच्चे आचरण और कर्म से है।
☒ B. धर्म का वास्तविक अर्थ विभिन्न मतों से है।
☒ C. धर्म का वास्तविक अर्थ विभिन्न पंथों से है।
☒ D. धर्म का वास्तविक अर्थ विभिन्न संप्रदायों से है।

Question ID : 63068071649

Comprehension:

निम्नलिखित गद्यांश को पढ़ें और प्रश्न का उत्तर दें:

वर्तमान समय में 'धर्म' शब्द का जिस अर्थ में प्रयोग किया जाता है उसका वास्तविक धर्म से कोई संबंध नहीं है। 'धर्म' का वास्तविक तात्पर्य है ऐसा आचरण अथवा कर्म जिससे मानव का विकास संभव होता है। यही आचरण नैतिक अथवा मानवोचित आचरण भी कहलाता है। भारत के आदि ऋषि-मुनियों ने धर्म का उल्लेख करते समय न तो लोक-परलोक की बात की है, न जाति अथवा समुदाय की और न ही व्यवसायगत भेदभाव की। एक सामान्य जनहित की दृष्टि से धर्म की व्याख्या की गई जिसका प्रमाण है - "परहित सरिस धर्म नहिं भाई। पर पीड़ा सम नहिं अधमाई।" उनके अनुसार मानव मात्र का एक ही धर्म है और वह है — मानवता।

परंतु आजकल 'धर्म' शब्द का प्रयोग पंथ, संप्रदाय, मत आदि के लिए किया जाता है। यह धर्म का संस्थागत रूप है। जब कोई व्यक्ति वास्तविक धर्म की भावना से प्रेरित होकर राजनीति में प्रवेश करता है और राजकार्य चलाता है, तो कहा जाता है कि वह राजधर्म का पालन कर रहा है अथवा धर्म की राजनीति कर रहा है। कदाचित यही धार्मिक राजनीति गाँधी जी द्वारा प्रस्तावित नैतिक राजनीति है।

SubQuestion No : 19

Q.19 प्रस्तुत गद्य भाग में किस तथ्य को उजागर करने का प्रयास किया गया है?

- Ans ☒ A. मनुष्य का सच्चा धर्म उसका धार्मिक आचरण है।
☒ B. मनुष्य का सच्चा धर्म उसका सांस्कृतिक आचरण है।
☒ C. मनुष्य का सच्चा धर्म उसका मानवोचित आचरण है।
☒ D. मनुष्य का सच्चा धर्म उसका राजनीतिक आचरण है।

Question ID : 63068071650

Comprehension:

निम्नलिखित गद्यांश को पढ़ें और प्रश्न का उत्तर दें:

वर्तमान समय में 'धर्म' शब्द का जिस अर्थ में प्रयोग किया जाता है उसका वास्तविक धर्म से कोई संबंध नहीं है। 'धर्म' का वास्तविक तात्पर्य है ऐसा आचरण अथवा कर्म जिससे मानव का विकास संभव होता है। यही आचरण नैतिक अथवा मानवोचित आचरण भी कहलाता है। भारत के आदि ऋषि-मुनियों ने धर्म का उल्लेख करते समय न तो लोक-परलोक की बात की है, न जाति अथवा समुदाय की और न ही व्यवसायगत भेदभाव की। एक सामान्य जनहित की दृष्टि से धर्म की व्याख्या की गई जिसका प्रमाण है - "परहित सरिस धर्म नहिं भाई। पर पीड़ा सम नहिं अधमाई।" उनके अनुसार मानव मात्र का एक ही धर्म है और वह है — मानवता।

परंतु आजकल 'धर्म' शब्द का प्रयोग पंथ, संप्रदाय, मत आदि के लिए किया जाता है। यह धर्म का संस्थागत रूप है। जब कोई व्यक्ति वास्तविक धर्म की भावना से प्रेरित होकर राजनीति में प्रवेश करता है और राजकार्य चलाता है, तो कहा जाता है कि वह राजधर्म का पालन कर रहा है अथवा धर्म की राजनीति कर रहा है। कदाचित यही धार्मिक राजनीति गाँधी जी द्वारा प्रस्तावित नैतिक राजनीति है।

SubQuestion No : 20

Q.20 प्रस्तुत पंक्तियों में प्रयोग किए गए "राजधर्म" शब्द का अर्थ निम्न में से कौनसा है?

- Ans ☒ A. राजा का संप्रदाय के प्रति कर्तव्य
☒ B. राजा का कुल के प्रति कर्तव्य
☒ C. राजा का मित्रों के प्रति कर्तव्य
☒ D. राजा का राज्य के प्रति कर्तव्य

Question ID : 63068071652