



# Teachingninja.in



**Latest Govt Job updates**



**Private Job updates**



**Free Mock tests available**



**Visit - [teachingninja.in](https://teachingninja.in)**

# **DSSSB**

**Previous Year Paper**  
**Storekeeper**  
**22 April 2021 Shift 2**





GOVT. OF NCT OF DELHI  
Delhi Subordinate Services Selection Board  
FC-18, Institutional Area, Karkardooma, Delhi – 110092.  
[www.dsssb.delhigovt.nic.in](http://www.dsssb.delhigovt.nic.in)

Participant ID:	
Participant Name:	
Test Center Name:	
Test Date:	22/04/2021
Test Time:	12:30 PM - 2:30 PM
Subject:	Store Keeper

Section : General intelligence and reasoning Ability1

Q.1 In the following question, select the related letter pair from the given alternatives.

MONI : NRRO :: ?

- Ans
- 1. LRPY : DVRN
  - 2. TVBX : CFYV
  - 3. GRAM : REVI
  - 4. MANP : URDN

Question ID : 5406266645

Q.2 A series is given with one term missing. Select the correct alternative from the given ones that will complete the series.

P23G, Y37L, H25Q, ? , Z27A

- Ans
- 1. R40V
  - 2. Q39V
  - 3. Q39U
  - 4. R40U

Question ID : 5406266637

Q.3 In a certain code language, 'MYSTA' is written as 'ZGHBN'. What is the code for 'GRAPE' in that code language?

- Ans
- 1. VKZTI
  - 2. VZKIT
  - 3. VKZIT
  - 4. VZKTI

Question ID : 5406266648

Q.4 In the following question, select the odd word from the given alternatives.

- Ans
- ☒ 1. Hospital
  - ☒ 2. School
  - ☒ 3. Doctor
  - ☒ 4. Restaurant

Question ID : 5406266638

Q.5 In a certain code language, 'FRAUDSTR' is written as 'KALKNHKM'. What is the code for 'TYRERING' in that code language?

- Ans
- ☒ 1. ZUBYXYRA
  - ☒ 2. ZVCYXYRA
  - ☒ 3. ZVBXXYRA
  - ☒ 4. ZUBYYYRA

Question ID : 5406266650

Q.6 In the following question, four letter pairs are given. The letters on left side of (–) is related to the letters on the right side of (–) with some Logic/Rule/Relation. Three are similar on basis of same Logic/Rule/Relation. Select the odd one out from the given alternatives.

- Ans
- ☒ 1. TBU – XFX
  - ☒ 2. MLA – EPQ
  - ☒ 3. GRF – JVK
  - ☒ 4. HVX – BZL

Question ID : 5406266640

Q.7 In the following question, a group of letters is given. The letters of each group are related with the letters of the same group by some Logic/Rule/Relation. From the given alternatives, select a group of letters which follows the same Logic/Rule/Relation.

(FM, JI, NE)

- Ans
- ☒ 1. (KP, OL, RH)
  - ☒ 2. (PE, TB, XW)
  - ☒ 3. (SC, WY, ZU)
  - ☒ 4. (AS, EO, IK)

Question ID : 5406266643

Q.8 A series is given with one term missing. Select the correct alternative from the given ones that will complete the series.

TP, VN, XL, ZJ, ?

- Ans
- ☒ 1. CH
  - ☒ 2. BH
  - ☒ 3. BI
  - ☒ 4. CI

Question ID : 5406266634

Q.9 In a certain code language, 'PINERAMT' is written as 'TRRVVZQG'. What is the code for 'GRANMIST' in that code language?

- Ans
- ☒ 1. KIFMQRWG
  - ☒ 2. KIEMQSWG
  - ☒ 3. KIENQRWG
  - ☒ 4. KIEMQRWG

Question ID : 5406266649

Q.10 In the following question, four letter pairs are given. The letters on left side of (–) is related to the letters on the right side of (–) with some Logic/Rule/Relation. Three are similar on basis of same Logic/Rule/Relation. Select the odd one out from the given alternatives.

- Ans
- ☒ 1. KLMA – NIPW
  - ☒ 2. LTVX – OQYU
  - ☒ 3. ANPG – DKSD
  - ☒ 4. FRIP – IOLM

Question ID : 5406266641

Q.11 Height of 8 persons P1, P2, P3, P4, P5, P6, P7 and P8 is compared. Height of only two persons is less than P6. Height of P4 is more than P6 but less than P1. Height of P8 and P2 is less than P5 but more than P1. Which of the following sequence of their heights can be correct?

- I.  $P7 = P3 < P6 < P4 < P1 < P8 < P2 < P5$   
II.  $P3 < P7 < P6 < P1 < P4 < P8 = P2 < P5$   
III.  $P7 < P3 < P6 < P4 < P1 < P2 = P8 < P5$
- Ans
- ☒ 1. II and III
  - ☒ 2. I and III
  - ☒ 3. Only II
  - ☒ 4. I, II and III

Question ID : 5406266653

Q.12 In a certain code language, 'PAN' is written as '31', 'MOL' is written as '40'. What is the code for 'PIG' in that code language?

- Ans
- ☒ 1. 34
  - ☒ 2. 33
  - ☒ 3. 31
  - ☒ 4. 32

Question ID : 5406266647

Q.13 6 boys A, B, C, D, E and F are sitting in a row facing towards south (not necessarily in the same order). E is second to the left of B. C is the immediate neighbour of E. A is fourth to the right of C. If F is the immediate neighbour of B and D, then which of the following statement is not correct?

- I. D is second to the right of B.
- II. Only B is sitting between C and D.

- Ans
- ☒ 1. Both I and II
  - ☒ 2. Only II
  - ☒ 3. Only I
  - ☒ 4. Neither I nor II

Question ID : 5406266652

Q.14 In the following question, select the odd word pair from the given alternatives.

- Ans
- ☒ 1. Boxing – Ring
  - ☒ 2. Rink – Skating
  - ☒ 3. Track – Race
  - ☒ 4. Pitch – Cricket

Question ID : 5406266639

Q.15 In a certain code language, 'MOIST' is written as 'RTNXY'. What is the code for 'GREAM' in that code language?

- Ans
- ☒ 1. LWJER
  - ☒ 2. LVJFR
  - ☒ 3. LVJER
  - ☒ 4. LWJFR

Question ID : 5406266646

Q.16 A series is given with one term missing. Select the correct alternative from the given ones that will complete the series.

MRPN, TZYX, AHHH, HPQR, ?

- Ans
- ☒ 1. OWZB
  - ☒ 2. OXZB
  - ☒ 3. OYAB
  - ☒ 4. OYZB

Question ID : 5406266636

Q.17 Five books P, Q, R, S and T are kept on above the other. Three books are kept between R and S. P is kept above T and below Q. If no book is kept above R, then which book is kept just above Q?

- Ans
- ☒ 1. R
  - ☐ 2. S
  - ☐ 3. P
  - ☐ 4. T

Question ID : 5406266651

Q.18 In the following question, select the related letter pair from the given alternatives.

FRAR : XGXL :: ?

- Ans
- ☐ 1. RFID : JPLX
  - ☒ 2. DAPN : TVGJ
  - ☐ 3. GHRK : QXNL
  - ☐ 4. MANG : LTGS

Question ID : 5406266644

Q.19 A series is given with one term missing. Select the correct alternative from the given ones that will complete the series.

TRF, XNJ, BJN, ?, JBV

- Ans
- ☐ 1. EER
  - ☐ 2. FES
  - ☒ 3. FFR
  - ☐ 4. EFR

Question ID : 5406266635

Q.20 In the following question, select the related words from the given alternatives.

Chess : Indoor :: Cricket : ?

- Ans
- ☐ 1. Wicket
  - ☐ 2. Player
  - ☐ 3. Pitch
  - ☒ 4. Outdoor

Question ID : 5406266642

Section : General intelligence and reasoning Ability2

Q.1 From the given answer figures, select the one in which the question figure is hidden/embedded.

- Ans
- ☒ 1.
  - ☒ 2.
  - ☒ 3.
  - ☒ 4.

Question ID : 5406266673

Q.2 Two figures given on the left side of (::) are related with some logic/rule/relation. Select the missing figure on the right of (::) from the given alternatives based on the same logic/rule/relation.

- Ans
- ☒ 1.
  - ☒ 2.
  - ☒ 3.
  - ☒ 4.

Question ID : 5406266666

Q.3 In the following question, select the missing number from the given series.

1/2, 5/3, 9/4, 13/5, 17/6, ?

- Ans
- ☒ 1. 19/7
  - ☒ 2. 21/7
  - ☒ 3. 20/7
  - ☒ 4. 22/7

Question ID : 5406266661

Q.4 In the following question below are given some statements followed by some conclusions based on those statements. Taking the given statements to be true even if they seem to be at variance from commonly known facts. Read all the conclusions and then decide which of the given conclusion logically follows the given statements.

Statements:

- I. No X is Y.
- II. No A is X.

Conclusions:

- I. Some Y are not X.
- II. Some Y are not A.
- III. No X is A.

- Ans
- ☒ 1. All conclusions follow
  - ☒ 2. Both conclusion II and III follows
  - ☒ 3. Both conclusion I and III follows
  - ☒ 4. Only conclusion II follows

Question ID : 5406266656



Q.5 Which answer figure will complete the pattern in the question figure?

- Ans
- ☒ 1.
  - ☒ 2.
  - ☒ 3.
  - ☒ 4.

Question ID : 5406266669

Q.6 Which of the following statement is incorrect?

- I. Number of rubbers which are neither book nor pen are 9.  
II. Number of pen which are book are 23.

- Ans
- ☒ 1. Both I and II
  - ☒ 2. Neither I nor II
  - ☒ 3. Only I
  - ☒ 4. Only II

Question ID : 5406266665

Q.7 In the following question, select the number which can be placed at the sign of question mark (?) from the given alternatives.

- Ans
- ☒ 1. 88
  - ☒ 2. 97
  - ☒ 3. 70
  - ☒ 4. 77

Question ID : 5406266659

Q.8 A piece of paper is folded and punched as shown below in the question figures. From the given answer figures, indicate how it will appear when opened?

- Ans
- ☒ 1.
  - ☒ 2.
  - ☒ 3.
  - ☒ 4.

Question ID : 5406266671

Q.9 If  $F + G$  means G is the son of F,  $F - G$  means G is brother of F,  $F * G$  means G is daughter of F,  $F @ G$  means G is the father of F and  $F \div G$  means G is the sister of F, then which of the following statement is correct about  $A \div M * R + E @ L - C$ ?

- I. R is the wife of brother of C.
- II. E is the son of L.
- III. A can be the uncle of R.

- Ans
- ☐ 1. I and II
  - ☐ 2. Only II
  - ☐ 3. II and III
  - ☒ 4. I, II and III

Question ID : 5406266654

Q.10 In the following question, select the figure which can be placed at the sign of question mark (?) from the given alternatives.

- Ans
- ☐ 1.
  - ☐ 2.
  - ☒ 3.
  - ☐ 4.

Question ID : 5406266668

Q.11 In the following question, select the related number from the given alternatives.

- 5428 : 38 :: ?
- Ans
- ☐ 1. 2349 : 20
  - ☐ 2. 2431 : 22
  - ☒ 3. 4927 : 44
  - ☐ 4. 4373 : 32

Question ID : 5406266660

Q.12 How many tyres are not white?

- Ans
- ☐ 1. 13
  - ☐ 2. 29
  - ☒ 3. 27
  - ☐ 4. 16

Question ID : 5406266663

Q.13 In the following question below are given some statements followed by some conclusions based on those statements. Taking the given statements to be true even if they seem to be at variance from commonly known facts. Read all the conclusions and then decide which of the given conclusion logically follows the given statements.

Statements:  
I. All K are G.  
II. Some G are H.

Conclusions:  
I. Some H are K.  
II. No K is H.

- Ans
- ☒ 1. Both conclusion I and II follows
  - ☒ 2. Only conclusion II follows
  - ☒ 3. Neither conclusion follows
  - ☒ 4. Only conclusion I follows

Question ID : 5406266655

Q.14 If a mirror is placed on the line AB, then which of the answer figures is the right image of the given figure?

- Ans
- ☒ 1.
  - ☒ 2.
  - ☒ 3.
  - ☒ 4.

Question ID : 5406266672

Q.15 In the following question below are given some statements followed by some conclusions based on those statements. Taking the given statements to be true even if they seem to be at variance from commonly known facts. Read all the conclusions and then decide which of the given conclusion logically follows the given statements.

Statements:  
I. All W are C.  
II. All C are L.  
III. All J are L.

Conclusions:  
I. No J is W.  
II. Some L are J.  
III. Some J are C.

- Ans
- ☒ 1. Only conclusion II follows
  - ☒ 2. Neither conclusion follows
  - ☒ 3. Only conclusion III follows
  - ☒ 4. All conclusions follow

Question ID : 5406266657

Q.16 How many triangles are there in the given figure?

- Ans
- ☒ 1. 13
  - ☒ 2. 14
  - ☒ 3. 15
  - ☒ 4. 16

Question ID : 5406266670

Q.17 In the following question, select the odd figure from the given alternatives.

- Ans
- ☒ 1.
  - ☒ 2.
  - ☒ 3.
  - ☒ 4.

Question ID : 5406266667

Q.18 In the following question below are given some statements followed by some conclusions based on those statements. Taking the given statements to be true even if they seem to be at variance from commonly known facts. Read all the conclusions and then decide which of the given conclusion logically follows the given statements.

Statements:  
I. No M is F.  
II. No R is A  
III. Some A are M.

Conclusions:  
I. Some M are not R.  
II. Some A are not F.  
III. Some F are not M.

- Ans
- ☒ 1. Only conclusion I follows
  - ☒ 2. All conclusions follow
  - ☒ 3. Both conclusion II and III follows
  - ☒ 4. Both conclusion I and III follows

Question ID : 5406266658

Q.19 Which of the following statement is correct?

I. Total number of wood are 29.  
II. Number of bottles which are only table are 9.

- Ans
- ☒ 1. Only II
  - ☒ 2. Only I
  - ☒ 3. Both I and II
  - ☒ 4. Neither I nor II

Question ID : 5406266664

Q.20 If 'A' means '+', 'B' means '-', 'C' means 'x' and 'D' means '÷', then 84 D 21 A 4 B 2 C 9 = ?

- Ans
- ☒ 1. 14
  - ☒ 2. 10
  - ☒ 3. 14
  - ☒ 4. 10

Question ID : 5406266662

Section : General Awareness1

Q.1 Who ruled in Delhi during 1414-1421?

- Ans
- ☒ 1. Firuz Shah Tughluq
  - ☒ 2. Ghiyasuddin Balban
  - ☒ 3. Khizr Khan
  - ☒ 4. Bahlul Lodi

Question ID : 5406266693

Q.2 Which of the following pair is correct?

- I. Spore formation – asexual reproduction
- II. Fragmentation – sexual reproduction

- Ans
- ☒ 1. Neither I nor II
  - ☒ 2. Only II
  - ☒ 3. I and II Both
  - ☒ 4. Only I

Question ID : 5406266683

Q.3 Losoong/Namsoong is the \_\_\_\_\_ New Year, which marks the end of harvest season.

- Ans
- ☒ 1. Manipuri
  - ☒ 2. Sikkimese
  - ☒ 3. Assamese
  - ☒ 4. Odissi

Question ID : 5406266677

Q.4 Which of the following is correct?

- I. Weight of a body is the product of its mass and the gravitation acceleration.
- II. Weight of a body is constant at all places on earth.

- Ans
- ☒ 1. I and II Both
  - ☒ 2. Only II
  - ☒ 3. Only I
  - ☒ 4. Neither I nor II

Question ID : 5406266685

Q.5 Which of the following statement(s) regarding the Brahmin Varna is/are correct?

I. It was the first Varna.

II. They were expected to study Vedas, performed sacrifices and received gifts.

- Ans
- ☒ 1. Both I and II
  - ☐ 2. Neither I nor II
  - ☐ 3. Only I
  - ☐ 4. Only II

Question ID : 5406266691

Q.6 \_\_\_\_\_ is a Metamorphic rock.

- Ans
- ☒ 1. Slate
  - ☐ 2. Granite
  - ☐ 3. Sandstone
  - ☐ 4. Basalt

Question ID : 5406266689

Q.7 The first tidal energy station was built in \_\_\_\_\_.

- Ans
- ☐ 1. China
  - ☒ 2. France
  - ☐ 3. Japan
  - ☐ 4. Nepal

Question ID : 5406266688

Q.8 In aerobic respiration, glucose breaks down into \_\_\_\_\_.

- Ans
- ☒ 1. Carbon dioxide, water, energy
  - ☐ 2. Carbon dioxide, alcohol, energy
  - ☐ 3. Water, alcohol, energy
  - ☐ 4. Carbon dioxide, energy

Question ID : 5406266682

Q.9 Which of the following statement is NOT true regarding revenue budget?

I. Revenue Budget shows the current receipts of the government and the expenditure that can be met from these receipts.

II. Revenue receipts are receipts of the government which are non-redeemable.

- Ans
- ☒ 1. Neither I nor II
  - ☐ 2. Only II
  - ☐ 3. Only I
  - ☐ 4. Both I and II

Question ID : 5406266680

Q.10 \_\_\_\_\_ is the only king in the history of the world who gave up conquest after winning the war.

- Ans
- ☒ 1. Harshvardhana
  - ☒ 2. Ashoka
  - ☒ 3. Pulakeshin II
  - ☒ 4. Chandragupta

Question ID : 5406266692

Q.11 Which of the following is NOT correct about image formation by a convex lens?

- I. Object at infinity, image real and erect
- II. Object at  $F_1$ , image real and erect
- III. Object at  $2F_1$ , image virtual and erect

- Ans
- ☒ 1. II and III
  - ☒ 2. I and II
  - ☒ 3. I, II and III
  - ☒ 4. I and III

Question ID : 5406266686

Q.12 Which of the following is correct?

- I. Sliding friction is smaller than static friction.
- II. Rolling friction is smaller than sliding friction.

- Ans
- ☒ 1. Neither I nor II
  - ☒ 2. I and II Both
  - ☒ 3. Only II
  - ☒ 4. Only I

Question ID : 5406266684

Q.13 Which is the solid crust or the hard top layer of the earth?

- Ans
- ☒ 1. Biosphere
  - ☒ 2. Lithosphere
  - ☒ 3. Hydrosphere
  - ☒ 4. Atmosphere

Question ID : 5406266687

Q.14 Which sector contribute to the GDP of India?

- I. Agriculture sector
- II. Service sector
- III. Industrial sector

- Ans
- ☒ 1. I, II and III
  - ☐ 2. I and II
  - ☐ 3. II and III
  - ☐ 4. I and III

Question ID : 5406266678

Q.15 Which of the following statement(s) regarding coniferous forests is/are correct?

- I. They are also known as Taiga.
- II. They are found in the higher latitudes of northern hemisphere.

- Ans
- ☐ 1. Only I
  - ☐ 2. Neither I nor II
  - ☐ 3. Only II
  - ☒ 4. Both I and II

Question ID : 5406266690

Q.16 \_\_\_\_\_ is often taken as a measure of a country's international competitiveness in international trade.

- Ans
- ☐ 1. Nominal Effective Exchange Rate
  - ☐ 2. Nominal Exchange Rate
  - ☒ 3. Real Exchange Rate
  - ☐ 4. Real Effective Exchange Rate

Question ID : 5406266681

Q.17 Bathukamma festival is associated with \_\_\_\_\_.

- Ans
- ☒ 1. Telangana
  - ☐ 2. Assam
  - ☐ 3. Manipur
  - ☐ 4. Sikkim

Question ID : 5406266674

Q.18 Nautanki is associated with which state?

- Ans
- ☐ 1. Rajasthan
  - ☐ 2. Maharashtra
  - ☒ 3. Uttar Pradesh
  - ☐ 4. Gujarat

Question ID : 5406266675



Q.19 Which of the following pair(s) of state– dance form is NOT correct?

- I. Kerala- Ottan Thullal
- II. Haryana - Chhau
- III. Madhya Pradesh - Setam

- Ans
- ☒ 1. Only III
  - ☒ 2. I and III
  - ☒ 3. I and II
  - ☒ 4. Only II

Question ID : 5406266676

Q.20 The minimum support prices are announced by the Government of India at the beginning of the\_\_\_\_\_.

- I. Sowing season
- II. Harvesting season

- Ans
- ☒ 1. Only I
  - ☒ 2. Only II
  - ☒ 3. Both I and II
  - ☒ 4. Neither I nor II

Question ID : 5406266679

Section : General Awareness2

Q.1 In which year congress adopted the demand for 'Purna Swaraj'?

- Ans
- ☒ 1. 1929
  - ☒ 2. 1926
  - ☒ 3. 1930
  - ☒ 4. 1932

Question ID : 5406266696

Q.2 Who has set the record for the longest stay in space by a woman in February 2020?

- Ans
- ☒ 1. Jessica Meir
  - ☒ 2. Christina Koch
  - ☒ 3. Kathleen Rubins
  - ☒ 4. Peggy Whitson

Question ID : 5406266703

Q.3 Who is the author of the book "Beautiful Things: A Memoir"?

- Ans
- ☐ 1. Michelle Obama
  - ☐ 2. Ivanka Trump
  - ☐ 3. Hillary Clinton
  - ☒ 4. Hunter Biden

Question ID : 5406266699

Q.4 Which scheme will give a 14-digit identification number to every plot of land in India?

- Ans
- ☒ 1. ULPIN
  - ☐ 2. LANDPIN
  - ☐ 3. LPNO
  - ☐ 4. ULPNO

Question ID : 5406266702

Q.5 Which Samaj was/were established in 1867?

- I. The Prarthana Samaj  
II. The Veda Samaj

- Ans
- ☐ 1. Both I and II
  - ☐ 2. Neither I nor II
  - ☒ 3. Only I
  - ☐ 4. Only II

Question ID : 5406266695

Q.6 Soil Health Card (SHC) Scheme was launched in which Indian state?

- Ans
- ☒ 1. Rajasthan
  - ☐ 2. Gujarat
  - ☐ 3. Bihar
  - ☐ 4. Kerala

Question ID : 5406266704

Q.7 Who has been conferred with the 51st Dadasaheb Phalke Award?

- Ans
- ☐ 1. Dev Anand
  - ☐ 2. Rishi Kapoor
  - ☐ 3. Amitabh Bachan
  - ☒ 4. Rajinikanth

Question ID : 5406266700

Q.8 Which Indian state hosted the FIH Men's World Cup 2018?

- Ans ☒ 1. Odisha  
☒ 2. Tamil Nadu  
☒ 3. Andhra Pradesh  
☒ 4. Jharkhand

Question ID : 5406266712

Q.9 How many silver medals did Indian won in 2016 Summer Olympics?

- Ans ☒ 1. 0  
☒ 2. 1  
☒ 3. 3  
☒ 4. 2

Question ID : 5406266711

Q.10 Udanta Singh is associated with which sport?

- Ans ☒ 1. Tennis  
☒ 2. Table Tennis  
☒ 3. Football  
☒ 4. Hockey

Question ID : 5406266713

Q.11 Which of the following statement(s) regarding Emergency is/are correct?

- I. Article 352 of the Indian constitution deals with Proclamation of Emergency.  
II. Article 353 of the Indian constitution deals with effect of proclamation of Emergency.

- Ans ☒ 1. Both I and II  
☒ 2. Only I  
☒ 3. Neither I nor II  
☒ 4. Only II

Question ID : 5406266709

Q.12 Which of the following writ(s) is/are mentioned in the Indian constitution?

- I. Habeas corpus  
II. Certiorari

- Ans ☒ 1. Only I  
☒ 2. Neither I nor II  
☒ 3. Only II  
☒ 4. Both I and II

Question ID : 5406266706

Q.13 Which city hosted the 2018 Commonwealth Games?

- Ans
- ☒ 1. Sydney
  - ☒ 2. Johannesburg
  - ☒ 3. Glasgow
  - ☒ 4. Gold Coast

Question ID : 5406266710

Q.14 Which schedule of the Indian constitution deals with the states?

- Ans
- ☒ 1. Second
  - ☒ 2. Fourth
  - ☒ 3. First
  - ☒ 4. Third

Question ID : 5406266707

Q.15 \_\_\_\_\_ was the first Indian woman to win the Miss World beauty pageant.

- Ans
- ☒ 1. Reita Faria
  - ☒ 2. Diana Hayden
  - ☒ 3. Sushmita Sen
  - ☒ 4. Aishwarya Rai

Question ID : 5406266698

Q.16 Which of the following state of India has celebrated its 35th Statehood day on 20 February 2021?

- Ans
- ☒ 1. Arunachal Pradesh
  - ☒ 2. Maharashtra
  - ☒ 3. Gujarat
  - ☒ 4. Assam

Question ID : 5406266705

Q.17 Which article of the Indian constitution deals with procedure of impeachment of the President?

- Ans
- ☒ 1. 59
  - ☒ 2. 58
  - ☒ 3. 61
  - ☒ 4. 55

Question ID : 5406266708

Q.18 Where are the headquarters of the World Health Organisation situated?

- Ans
- ☐ 1. Washington D.C.
  - ☐ 2. Paris
  - ☒ 3. Geneva
  - ☐ 4. Vienna

Question ID : 5406266697

Q.19 Which of the following statement(s) regarding Hampi is/are correct?

- I. It is located in the Krishna-Tungabhadra basin.  
II. It's architecture was distinctive.

- Ans
- ☐ 1. Only I
  - ☐ 2. Only II
  - ☒ 3. Both I and II
  - ☐ 4. Neither I nor II

Question ID : 5406266694

Q.20 What is the name of the world's first Gamified Sanskrit learning App?

- Ans
- ☐ 1. Sanskrit Guru
  - ☐ 2. Bhasha Guru
  - ☐ 3. Gyan Guru
  - ☒ 4. Little Guru

Question ID : 5406266701

Section : Arithmetical and Numerical ability1

Q.1 Three cups contain mixture of milk and water in ratio 13 : 12, 9 : 14, 2 : 1 respectively. 25 liters of first and 23 liters of second cup are taken. How much quantity from third cup is to be taken so that final mixture from the three cups will have milk and water in ratio 1 : 1?

- Ans
- ☐ 1. 6 litres
  - ☐ 2. 3 litres
  - ☒ 3. 12 litres
  - ☐ 4. 18 litres

Question ID : 5406266731

Q.2

- Ans
- ☐ 1. 200
  - ☐ 2. 198
  - ☒ 3. 908
  - ☐ 4. 100

Question ID : 5406266715

Q.3 What is the value of  $(\sqrt{0.36} + \sqrt{0.25}) \times \sqrt{0.01}$ ?

Ans ☒ 1. 11/100

☒ 2. 100/11

☒ 3. 1

☒ 4. 2

Question ID : 5406266714

Q.4 The ratio of two numbers is 5 : 6. If the sum of both the numbers is 220, then what is the smaller number among both the numbers?

Ans ☒ 1. 120

☒ 2. 160

☒ 3. 140

☒ 4. 100

Question ID : 5406266728

Q.5 Ram bought two shirts for Rs. 2624. He sold one at a loss of 20 percent and other at a profit of 25 percent. If each shirt was sold for the same price, then what is the cost price of the shirt which was sold at loss?

Ans ☒ 1. Rs. 1800

☒ 2. Rs. 1200

☒ 3. Rs. 2000

☒ 4. Rs. 1600

Question ID : 5406266727

Q.6 If a number P is 10 percent less than another number Q and Q is 25 percent more than 180, then what is the value of P?

Ans ☒ 1. 202.5

☒ 2. 203.5

☒ 3. 204.5

☒ 4. 200.65

Question ID : 5406266721

Q.7 A table is bought for Rs. 800 and is sold at 40 percent loss. What is the selling price of the table?

Ans ☒ 1. Rs. 480

☒ 2. Rs. 500

☒ 3. Rs. 520

☒ 4. Rs. 440

Question ID : 5406266725

Q.8 Which of the following statements(s) is/are correct?

- I. The average of 21 numbers is 19. If the average of first 7 numbers is 16, then average of remaining numbers will be 19.  
II. Average of 145, 219, 516, 283 and 247 is 282.

- Ans ☒ 1. Only II  
☐ 2. Only I  
☐ 3. Both I and II  
☐ 4. Neither I nor II

Question ID : 5406266719

Q.9 An item is sold at two successive discounts of 10 percent and 20 percent. The selling price of article after second discount is Rs. 1800. If it is sold only at one discount of 30 percent then what will be the selling price of the article?

- Ans ☐ 1. Rs. 1800  
☐ 2. Rs. 1680  
☐ 3. Rs. 1740  
☒ 4. Rs. 1750

Question ID : 5406266720

Q.10 Rs. 24600 is divided among E, F and G. E's share and F's share are in the ratio of 2 : 5 and F's share and G's share are in the ratio of 3 : 4. How much amount will F receive?

- Ans ☐ 1. Rs. 15000  
☐ 2. Rs. 12000  
☒ 3. Rs. 9000  
☐ 4. Rs. 3600

Question ID : 5406266729

Q.11 In an office, 45 percent of the total employees are female. 30 percent of the female employees are married and 90 percent of the male employees are married. Unmarried employees are what percentage of the total employees in office?

- Ans ☐ 1. 35 percent  
☐ 2. 33 percent  
☒ 3. 37 percent  
☐ 4. 43 percent

Question ID : 5406266723

Q.12 Cost price of an article is Rs. 9500. If the loss percentage is 22 percent, then what is the selling price of the article?

- Ans ☐ 1. Rs. 7280  
☐ 2. Rs. 7520  
☐ 3. Rs. 7500  
☒ 4. Rs. 7410

Question ID : 5406266726

Q.13

- Ans ☒ 1. 23/21  
☒ 2. 33/23  
☒ 3. 31/21  
☒ 4. 29/23

Question ID : 5406266717

Q.14 What is the rate of simple interest at which a sum of money becomes three times of itself in 38 years?

- Ans ☒ 1. 5.26 percent  
☒ 2. 6.28 percent  
☒ 3. 4.87 percent  
☒ 4. 5.85 percent

Question ID : 5406266732

Q.15 In a 75 litres mixture the ratio of alcohol and water is 2 : 3 respectively. 25 litres of mixture is taken out and replaced with 25 litres of water. What is the new ratio of alcohol and water respectively?

- Ans ☒ 1. 11 : 4  
☒ 2. 4 : 9  
☒ 3. 4 : 11  
☒ 4. 5 : 11

Question ID : 5406266730

Q.16 A's income is 125 percent of B's income and A's expenditure is 60 percent of B's expenditure. If B saves 30 percent of his income, then how much percentage does A save of his own income?

- Ans ☒ 1. 66.4 percent  
☒ 2. 48.2 percent  
☒ 3. 40.8 percent  
☒ 4. 52.6 percent

Question ID : 5406266722

Q.17 Suresh gives 25 percent of a amount to his wife, 45 percent to his daughter and 20 percent of the remaining part to his son. If Suresh is left with Rs. 4800, then how much amount did Suresh have in the beginning?

- Ans ☒ 1. Rs. 40000  
☒ 2. Rs. 25000  
☒ 3. Rs. 10000  
☒ 4. Rs. 20000

Question ID : 5406266724



Q.18 From the set of first 100 natural numbers, all the multiples of 3 are removed. What is the sum of the remaining numbers?

- Ans
- ☐ 1. 4263
  - ☒ 2. 3367
  - ☐ 3. 942
  - ☐ 4. 736

Question ID : 5406266716

Q.19 The average weight of two players P and Q of a football team is 38 kg. The average weight of P, Q and their coach R is 49 kg. What is the weight of coach?

- Ans
- ☐ 1. 75 kg
  - ☐ 2. 69 kg
  - ☐ 3. 67 kg
  - ☒ 4. 71 kg

Question ID : 5406266718

Q.20 A sum becomes 1.44 times of itself in 2 years when invested at compound interest (compounded annually). What is the rate of interest per annum?

- Ans
- ☐ 1. 21 percent
  - ☐ 2. 30 percent
  - ☐ 3. 25 percent
  - ☒ 4. 20 percent

Question ID : 5406266733

Section : Arithmetical and Numerical ability2

Q.1 A taxi covers a distance of 3420 km in 19 hours. What is its speed?

- Ans
- ☐ 1. 40 metres/seconds
  - ☐ 2. 35 metre/seconds
  - ☐ 3. 45 metres/seconds
  - ☒ 4. 50 metres/seconds

Question ID : 5406266736

Q.2 A train can cross a platform of length 610 meter in 50 seconds and it can cross a 450 meter long platform in 42 seconds. Which of the following statements is/are correct?

- I. Speed of the train is 72 km/hr.  
II. Length of the train is 450 meters.

- Ans
- ☐ 1. Both I and II
  - ☐ 2. Neither I nor II
  - ☐ 3. Only II
  - ☒ 4. Only I

Question ID : 5406266738

Q.3 If total surface area of a cube is  $384 \text{ cm}^2$ , then what is the volume of cube?

- Ans
- ☐ 1.  $729 \text{ cm}^3$
  - ☐ 2.  $625 \text{ cm}^3$
  - ☐ 3.  $343 \text{ cm}^3$
  - ☒ 4.  $512 \text{ cm}^3$

Question ID : 5406266743

Q.4 The line chart given below shows the number of guns sold in a country in 6 consecutive years.

What is the total number of guns sold in these 6 years together?

- Ans
- ☐ 1. 3350
  - ☐ 2. 3450
  - ☐ 3. 3500
  - ☒ 4. 3400

Question ID : 5406266750

Q.5 The table given below shows the number of shoes and bags sold by a shop in 5 consecutive months.

Which of the following is the correct relation of the average number of shoes sold per month (S) and the average number of bags sold per month (B)?

- Ans
- ☐ 1.  $2S = 7B$
  - ☐ 2.  $5S = 11B$
  - ☐ 3.  $3S = 8B$
  - ☒ 4.  $4S = 9B$

Question ID : 5406266749

Q.6 A is thrice as good a workman as B and therefore is able to finish a job in 24 days less than B. In how many days together can they complete the same work?

- Ans
- ☐ 1. 11 days
  - ☐ 2. 15 days
  - ☐ 3. 12 days
  - ☒ 4. 9 days

Question ID : 5406266740

Q.7 The line chart given below shows the number of bundles (B) and the number of papers per bundle (P) of 5 different colours.

What is the total number of papers of all the colours together?

- Ans
- ☐ 1. 12680
  - ☐ 2. 12250
  - ☐ 3. 11530
  - ☒ 4. 11740

Question ID : 5406266752

Q.8 A and B together can do a piece of work in 60 days. B and C together can do the work in 40 days. A starts the work and works on it for 16 days then leaves. Then B takes up, works for 28 days and leaves. Finally C finishes the remaining work in 38 days. In how many days can B complete the entire work alone?

- Ans
- ☒ 1. 120 days
  - ☐ 2. 75 days
  - ☐ 3. 80 days
  - ☐ 4. 90 days

Question ID : 5406266741

Q.9 If 7 men working 7 hours per day for 7 days produces 42 chairs, then how many chairs 14 men will produce working 14 hours per day for 14 days?

- Ans
- ☒ 1. 336
  - ☐ 2. 324
  - ☐ 3. 350
  - ☐ 4. 328

Question ID : 5406266739

Q.10 A metallic sphere is melted and moulded to form conical shaped bullets. If radius of the bullet is five times of its height and radius of bullet is half of the radius of the metallic sphere, then what is the numbers of bullets formed?

- Ans
- ☐ 1. 150
  - ☐ 2. 120
  - ☒ 3. 160
  - ☐ 4. 190

Question ID : 5406266745

Q.11 A solid sphere of diameter 5.6 cm is cut into two equal halves. What will be the increase in the total surface area?

- Ans
- ☐ 1. 42.92 cm<sup>2</sup>
  - ☐ 2. 54.62 cm<sup>2</sup>
  - ☐ 3. 37.56 cm<sup>2</sup>
  - ☒ 4. 49.28 cm<sup>2</sup>

Question ID : 5406266744

Q.12 The pie chart given below shows the number of shirts of 5 different colours. The numbers are shown as as percentage of the total number of these 5 shirts.

If the number of shirts of R5 are 475, then what is the number of R1 shirts?

- Ans
- ☐ 1. 440
  - ☐ 2. 660
  - ☐ 3. 528
  - ☒ 4. 550

Question ID : 5406266747

Q.13 The bar chart given shows the number of mobile phones imported (in 000's) in a country in 5 consecutive years.

What is the average number of mobile phones imported in the country per year?

- Ans
- ☒ 1. 284000
  - ☐ 2. 236000
  - ☐ 3. 256000
  - ☐ 4. 272000

Question ID : 5406266751

Q.14 The length of the side of a cube is 9.8 cm. What is the approximate volume of the largest sphere that can be taken out of the cube?

- Ans
- ☐ 1. 396 cm<sup>3</sup>
  - ☐ 2. 376 cm<sup>3</sup>
  - ☒ 3. 493 cm<sup>3</sup>
  - ☐ 4. 503 cm<sup>3</sup>

Question ID : 5406266746

Q.15 If interest being compounded half yearly and rate of interest being 30 percent per annum, then in how much time Rs. 20000 will become Rs. 30417.5 at compound interest?

- Ans
- ☒ 1. 6 months
  - ☒ 2. 18 months
  - ☒ 3. 24 months
  - ☒ 4. 12 months

Question ID : 5406266735

Q.16 The difference between the compound interest (annual compounding) and simple interest on a sum at the rate of 10 percent per annum for 2 years is Rs. 360. What is the sum?

- Ans
- ☒ 1. Rs. 36000
  - ☒ 2. Rs. 30000
  - ☒ 3. Rs. 42000
  - ☒ 4. Rs. 32000

Question ID : 5406266734

Q.17 Working together R and S have to type a book containing 200 pages. R takes 8 hrs to type 64 pages and S takes 10 hrs to type 40 pages. R typed first 80 pages alone and the last 120 pages were typed by R and S together. How much time will be taken to type the complete book?

- Ans
- ☒ 1. 32 hours
  - ☒ 2. 22 hours
  - ☒ 3. 20 hours
  - ☒ 4. 40 hours

Question ID : 5406266742

Q.18 The pie chart given below shows the number of packets of 6 different types of noodles sold by a shop in a year.

What is the sum of the central angles made by N3 and N5?

- Ans
- ☒ 1. 115.2 degrees
  - ☒ 2. 108 degrees
  - ☒ 3. 104.4 degrees
  - ☒ 4. 122.4 degrees

Question ID : 5406266748

Q.19 A bus starts from a bus stand after every 30 minutes in the same direction. Mohit is moving in opposite direction with a speed of 50 km/hr. If Mohit meets each bus in 10 minutes, then what is the speed of bus?

- Ans
- ☒ 1. 40 km/hr
  - ☒ 2. 35 km/hr
  - ☒ 3. 30 km/hr
  - ☒ 4. 25 km/hr

Question ID : 5406266737

Q.20 The bar chart given below shows the number of runs scored and number of balls played by a player in 5 different innings.  
Strike rate = Runs scored/balls played

Which of the following statement is correct?  
I. The highest strike rate is in inning I4.  
II. The lowest strike rate is in inning I3.

- Ans
- ☒ 1. Only I
  - ☒ 2. Both I and II
  - ☒ 3. Neither I nor II
  - ☒ 4. Only II

Question ID : 5406266753

Section : English Language & Comprehension1

Q.1 Rearrange the parts of the sentence in the correct order.

Conifers flourish  
P. increasingly confined to subtropical  
Q. while palms are  
R. and tropical regions  
S. at high latitudes,

- Ans
- ☒ 1. QPSR
  - ☒ 2. SQPR
  - ☒ 3. QSPR
  - ☒ 4. RQSP

Question ID : 5406266769

Q.2 The question below consists of a set of labelled sentences. Out of the four options given, select the most logical order of the sentences to form a coherent paragraph.

P. hibernation is nothing like a regular night's sleep  
Q. in fact, significant physical changes occur within the body during the hibernation period  
R. the effect can be so extreme that a hibernating animal may appear dead  
S. an animal's body temperature plunges, and its respiration and heart rate slow dramatically

- Ans
- ☒ 1. SQPR
  - ☒ 2. PQSR
  - ☒ 3. PRSQ
  - ☒ 4. PQRS

Question ID : 5406266770

**Q.3** A sentence has been given with a blank to be filled with an appropriate word. Choose the correct alternative.

I am annoyed because you are \_\_\_\_\_ senseless questions.

- Ans
- ☒ 1. asking
  - ☐ 2. placing
  - ☐ 3. telling
  - ☐ 4. saying

Question ID : 5406266763

**Q.4** Improve the bracketed part of the sentence. If there is no improvement then select 'no improvement'.

Mr. Davis, (is married) and has three children.

- Ans
- ☐ 1. is marry
  - ☐ 2. is wedding
  - ☐ 3. can marry
  - ☒ 4. No improvement

Question ID : 5406266759

**Q.5** A sentence has been given with a blank to be filled with an appropriate word. Choose the correct alternative.

Resolving conflicts is an important \_\_\_\_\_ for children to learn.

- Ans
- ☒ 1. skill
  - ☐ 2. hurdle
  - ☐ 3. onus
  - ☐ 4. banter

Question ID : 5406266767

**Q.6** Improve the bracketed part of the sentence. If there is no improvement then select 'no improvement'.

The book in your hand (address the suffering) of the people.

- Ans
- ☒ 1. addresses the suffering
  - ☐ 2. addressed the suffer
  - ☐ 3. addressing suffering
  - ☐ 4. No improvement

Question ID : 5406266761

Q.7 Find the part of the given sentence that has an error in it. If there is no error, choose 'No error'.

Newsmen along with (1)/ the politician is (2)/ coming today. (3)/ No error (4)

- Ans
- ☒ 1. Newsmen along with
  - ☒ 2. coming today.
  - ☒ 3. No error
  - ☒ 4. the politician is

Question ID : 5406266755

Q.8 Rearrange the parts of the sentence in the correct order.

Dinosaur is the  
P. common name given to  
Q. a group of reptiles, often very  
R. large, that first appeared roughly  
S. 245 million years ago

- Ans
- ☒ 1. PQRS
  - ☒ 2. PSQR
  - ☒ 3. RQPS
  - ☒ 4. QRPS

Question ID : 5406266768

Q.9 What is the synonym of the word?

Hustle

- Ans
- ☒ 1. Trip
  - ☒ 2. Clean
  - ☒ 3. Hurry
  - ☒ 4. Tug

Question ID : 5406266771

Q.10 Find the part of the given sentence that has an error in it. If there is no error, choose 'No error'.

Probiotics are essential to (1)/ help breakdown food (2)/ in vitamins and amino acids. (3)/ No error (4)

- Ans
- ☒ 1. in vitamins and amino acids.
  - ☒ 2. Probiotics are essential to
  - ☒ 3. help breakdown food
  - ☒ 4. No error

Question ID : 5406266758



Q.11 What is the synonym of the word?

Mirth

- Ans
- ☒ 1. Glee
  - ☐ 2. Anger
  - ☐ 3. Mistrust
  - ☐ 4. Sarcasm

Question ID : 5406266773

Q.12 Improve the bracketed part of the sentence. If there is no improvement then select 'no improvement'.

Private tuitions (is not allowed) in this building after 8 pm.

- Ans
- ☐ 1. may not be allowed
  - ☐ 2. is quite not allowed
  - ☐ 3. No improvement
  - ☒ 4. are not allowed

Question ID : 5406266762

Q.13 Find the part of the given sentence that has an error in it. If there is no error, choose 'No error'.

Densely occupied rooms and tightly (1)/ sealed buildings are the main cause for (2)/ high levels of carbon dioxide. (3)/ No error (4)

- Ans
- ☐ 1. Densely occupied rooms and tightly
  - ☒ 2. sealed buildings are the main cause for
  - ☐ 3. high levels of carbon dioxide.
  - ☐ 4. No error

Question ID : 5406266756

Q.14 Find the part of the given sentence that has an error in it. If there is no error, choose 'No error'.

Chemicals such as pesticides (1)/ and fungicides harm (2)/ both honey bees and wild native bees. (3)/ No error (4)

- Ans
- ☐ 1. Chemicals such as pesticides
  - ☒ 2. No error
  - ☐ 3. and fungicides harm
  - ☐ 4. both honey bees and wild native bees.

Question ID : 5406266757

Q.15 What is the synonym of the word?

Grapple

- Ans
- ☒ 1. Intend
  - ☒ 2. Release
  - ☒ 3. Grasp
  - ☒ 4. Laugh

Question ID : 5406266772

Q.16 A sentence has been given with a blank to be filled with an appropriate word. Choose the correct alternative.

This is a \_\_\_\_\_ process and it could be a matter of months before we have any results.

- Ans
- ☒ 1. slowly
  - ☒ 2. slower
  - ☒ 3. slow
  - ☒ 4. slowest

Question ID : 5406266765

Q.17 Improve the bracketed part of the sentence. If there is no improvement then select 'no improvement'.

The idea of an apocalypse, (have existed) for thousands of years.

- Ans
- ☒ 1. had exist
  - ☒ 2. have been exist
  - ☒ 3. has existed
  - ☒ 4. No improvement

Question ID : 5406266760

Q.18 A sentence has been given with a blank to be filled with an appropriate word. Choose the correct alternative.

I know it seems like getting dressed is \_\_\_\_\_ because we are in the house.

- Ans
- ☒ 1. trepid
  - ☒ 2. iconic
  - ☒ 3. fateful
  - ☒ 4. silly

Question ID : 5406266766

Q.19 A sentence has been given with a blank to be filled with an appropriate word. Choose the correct alternative.

A pandemic or other disaster presents challenges \_\_\_\_ parents.

- Ans
- ☒ 1. with
  - ☒ 2. for
  - ☒ 3. on
  - ☒ 4. in

Question ID : 5406266764

Q.20 Find the part of the given sentence that has an error in it. If there is no error, choose 'No error'.

My driver or (1)/ my maid are stealing (2)/ from me. (3)/ No error (4)

- Ans
- ☒ 1. my maid are stealing
  - ☒ 2. My driver or
  - ☒ 3. from me.
  - ☒ 4. No error

Question ID : 5406266754

Section : English Language & Comprehension2

Q.1 In the given question, four words are given out of which one word is correctly spelt. Choose the correctly spelt word.

- Ans
- ☒ 1. Guarantey
  - ☒ 2. Gaurantee
  - ☒ 3. Guarantee
  - ☒ 4. Gauranty

Question ID : 5406266776

Q.2 In the given question, four words are given out of which one word is correctly spelt. Choose the correctly spelt word.

- Ans
- ☒ 1. Eccentricity
  - ☒ 2. Ecentricity
  - ☒ 3. Eccentriccity
  - ☒ 4. Ecentriccity

Question ID : 5406266779

**Q.3** In the following question, out of the given four alternatives, select the alternative which best expresses the meaning of the Idiom/Phrase.

To die in harness

- Ans
- ☒ 1. To die while in duty
  - ☐ 2. Die after doing work
  - ☐ 3. Die early
  - ☐ 4. Die peacefully

Question ID : 5406266783

**Q.4** In the following question, out of the given four alternatives, select the alternative which best expresses the meaning of the Idiom/Phrase.

Talk through one's hat

- Ans
- ☐ 1. Talk positively
  - ☐ 2. Talk good points
  - ☒ 3. Talk nonsense
  - ☐ 4. To talk secretly

Question ID : 5406266781

**Q.5** Choose the word that can substitute the given sentence.

One who talks in sleep

- Ans
- ☐ 1. Intestate
  - ☐ 2. Gullible
  - ☒ 3. Somniloquy
  - ☐ 4. Somnambulist

Question ID : 5406266788

**Q.6** Choose the word that can substitute the given sentence.

The person who works for free

- Ans
- ☐ 1. Servant
  - ☐ 2. Organiser
  - ☒ 3. Volunteer
  - ☐ 4. Member

Question ID : 5406266785

Q.7 What is the antonym of the word?

Confederate

- Ans
- ☒ 1. Cluster
  - ☒ 2. Confuse
  - ☒ 3. Disband
  - ☒ 4. Wander

Question ID : 5406266775

Q.8 Choose the word that can substitute the given sentence.

One who can speak two languages

- Ans
- ☒ 1. Polygamy
  - ☒ 2. Linguistic
  - ☒ 3. Bilingual
  - ☒ 4. Bilateral

Question ID : 5406266787

Q.9 Choose the word that can substitute the given sentence.

One who speaks less

- Ans
- ☒ 1. Reticent
  - ☒ 2. Hypocrite
  - ☒ 3. Misogynist
  - ☒ 4. Obsolete

Question ID : 5406266786

Q.10 In the given question, four words are given out of which one word is correctly spelt. Choose the correctly spelt word.

- Ans
- ☒ 1. Incontrovertable
  - ☒ 2. Introconvertable
  - ☒ 3. Incontrovertible
  - ☒ 4. Incontroveartible

Question ID : 5406266778

Q.11 In the following question, out of the given four alternatives, select the alternative which best expresses the meaning of the Idiom/Phrase.

Once in a blue moon

- Ans
- ☒ 1. Frequently
  - ☒ 2. Very rarely
  - ☒ 3. Something interesting
  - ☒ 4. Very common

Question ID : 5406266784

Q.12 In the given question, four words are given out of which one word is correctly spelt. Choose the correctly spelt word.

- Ans
- ☒ 1. Acctuality
  - ☒ 2. Actuality
  - ☒ 3. Actuallity
  - ☒ 4. Actuality

Question ID : 5406266780

Q.13 In the given question, four words are given out of which one word is correctly spelt. Choose the correctly spelt word.

- Ans
- ☒ 1. Hedgehog
  - ☒ 2. Hadgehogue
  - ☒ 3. Hadgehog
  - ☒ 4. Hedgehogue

Question ID : 5406266777

Q.14 What is the antonym of the word?

Abound

- Ans
- ☒ 1. Bless
  - ☒ 2. Discourage
  - ☒ 3. Rest
  - ☒ 4. Lack

Question ID : 5406266774

Q.15 In the following question, out of the given four alternatives, select the alternative which best expresses the meaning of the Idiom/Phrase.

The lion's share

- Ans
- ☒ 1. Equal parts
  - ☒ 2. Get nothing
  - ☒ 3. The smallest part
  - ☒ 4. The biggest part

Question ID : 5406266782

**Comprehension:**

Read the following information carefully and answer the given questions.

The beginnings of pharmacy are ancient. When the first person expressed juice from a succulent leaf to apply to a wound, this art was being practiced. In the Greek legend, Asclepius, the god of the healing art, delegated to Hygieia the duty of compounding his remedies. She was his apothecary or pharmacist. The physician-priests of Egypt were divided into two classes: those who visited the sick and those who remained in the temple and prepared remedies for the patients.

In ancient Greece and Rome and during the Middle Ages in Europe, the art of healing recognized a separation between the duties of the physician and those of the herbalist, who supplied the physician with the raw materials from which to make medicines. The Arabian influence in Europe during the 8th century AD, however, brought about the practice of separate duties for the pharmacist and physician. The trend toward specialization was later reinforced by a law enacted by the city council of Bruges in 1683, forbidding physicians to prepare medications for their patients. In America, Benjamin Franklin took a pivotal step in keeping the two professions separate when he appointed an apothecary to the Pennsylvania Hospital. The development of the pharmaceutical industry since World War II led to the discovery and use of new and effective drug substances. It also changed the role of the pharmacist. The scope for extemporaneous compounding of medicines was much diminished and with it the need for the manipulative skills that were previously applied by the pharmacist to the preparation of bougies, cachets, pills, plasters, and potions. The pharmacist continues, however, to fulfill the prescriber's intentions by providing advice and information; by formulating, storing, and providing correct dosage forms; and by assuring the efficacy and quality of the dispensed or supplied medicinal product.

**SubQuestion No : 16**

**Q.16** The synonym of the word "apothecary" is?

- Ans
- ☒ 1. Doctor
  - ☒ 2. Chemist
  - ☒ 3. Clinic
  - ☒ 4. Sanatorium

Question ID : 5406266794



**Comprehension:**

Read the following information carefully and answer the given questions.

The beginnings of pharmacy are ancient. When the first person expressed juice from a succulent leaf to apply to a wound, this art was being practiced. In the Greek legend, Asclepius, the god of the healing art, delegated to Hygieia the duty of compounding his remedies. She was his apothecary or pharmacist. The physician-priests of Egypt were divided into two classes: those who visited the sick and those who remained in the temple and prepared remedies for the patients.

In ancient Greece and Rome and during the Middle Ages in Europe, the art of healing recognized a separation between the duties of the physician and those of the herbalist, who supplied the physician with the raw materials from which to make medicines. The Arabian influence in Europe during the 8th century AD, however, brought about the practice of separate duties for the pharmacist and physician. The trend toward specialization was later reinforced by a law enacted by the city council of Bruges in 1683, forbidding physicians to prepare medications for their patients. In America, Benjamin Franklin took a pivotal step in keeping the two professions separate when he appointed an apothecary to the Pennsylvania Hospital. The development of the pharmaceutical industry since World War II led to the discovery and use of new and effective drug substances. It also changed the role of the pharmacist. The scope for extemporaneous compounding of medicines was much diminished and with it the need for the manipulative skills that were previously applied by the pharmacist to the preparation of bougies, cachets, pills, plasters, and potions. The pharmacist continues, however, to fulfill the prescriber's intentions by providing advice and information; by formulating, storing, and providing correct dosage forms; and by assuring the efficacy and quality of the dispensed or supplied medicinal product.

**SubQuestion No : 17**

**Q.17 In the Greek legend, who was the god of healing?**

- Ans
- ☒ 1. Aphrodite
  - ☒ 2. Asclepius
  - ☒ 3. Zeus
  - ☒ 4. Hygieia

Question ID : 5406266792





**Comprehension:**





Read the following information carefully and answer the given questions.

The beginnings of pharmacy are ancient. When the first person expressed juice from a succulent leaf to apply to a wound, this art was being practiced. In the Greek legend, Asclepius, the god of the healing art, delegated to Hygieia the duty of compounding his remedies. She was his apothecary or pharmacist. The physician-priests of Egypt were divided into two classes: those who visited the sick and those who remained in the temple and prepared remedies for the patients.

In ancient Greece and Rome and during the Middle Ages in Europe, the art of healing recognized a separation between the duties of the physician and those of the herbalist, who supplied the physician with the raw materials from which to make medicines. The Arabian influence in Europe during the 8th century AD, however, brought about the practice of separate duties for the pharmacist and physician. The trend toward specialization was later reinforced by a law enacted by the city council of Bruges in 1683, forbidding physicians to prepare medications for their patients. In America, Benjamin Franklin took a pivotal step in keeping the two professions separate when he appointed an apothecary to the Pennsylvania Hospital. The development of the pharmaceutical industry since World War II led to the discovery and use of new and effective drug substances. It also changed the role of the pharmacist. The scope for extemporaneous compounding of medicines was much diminished and with it the need for the manipulative skills that were previously applied by the pharmacist to the preparation of bougies, cachets, pills, plasters, and potions. The pharmacist continues, however, to fulfill the prescriber's intentions by providing advice and information; by formulating, storing, and providing correct dosage forms; and by assuring the efficacy and quality of the dispensed or supplied medicinal product.

**SubQuestion No : 18**

**Q.18 Based on the passage, how were physicians divided in ancient Egypt?**

- Ans  1. One visited the sick, while the other remained in the temple and prepared medicine for the patients.
-  2. One attended to the sick in the temple, while the other prepared the potions and pills.
-  3. There was no strict differentiation, the roles of physician and pharmacist overlapped frequently.
-  4. One cured the sick, while the other handed out already made medicines.

Question ID : 5406266791



**Comprehension:**

Read the following information carefully and answer the given questions.

The beginnings of pharmacy are ancient. When the first person expressed juice from a succulent leaf to apply to a wound, this art was being practiced. In the Greek legend, Asclepius, the god of the healing art, delegated to Hygieia the duty of compounding his remedies. She was his apothecary or pharmacist. The physician-priests of Egypt were divided into two classes: those who visited the sick and those who remained in the temple and prepared remedies for the patients.

In ancient Greece and Rome and during the Middle Ages in Europe, the art of healing recognized a separation between the duties of the physician and those of the herbalist, who supplied the physician with the raw materials from which to make medicines. The Arabian influence in Europe during the 8th century AD, however, brought about the practice of separate duties for the pharmacist and physician. The trend toward specialization was later reinforced by a law enacted by the city council of Bruges in 1683, forbidding physicians to prepare medications for their patients. In America, Benjamin Franklin took a pivotal step in keeping the two professions separate when he appointed an apothecary to the Pennsylvania Hospital. The development of the pharmaceutical industry since World War II led to the discovery and use of new and effective drug substances. It also changed the role of the pharmacist. The scope for extemporaneous compounding of medicines was much diminished and with it the need for the manipulative skills that were previously applied by the pharmacist to the preparation of bougies, cachets, pills, plasters, and potions. The pharmacist continues, however, to fulfill the prescriber's intentions by providing advice and information; by formulating, storing, and providing correct dosage forms; and by assuring the efficacy and quality of the dispensed or supplied medicinal product.

**SubQuestion No : 19**

**Q.19** According to the passage, which of the following statement is incorrect?

- Ans
- ☒ 1. A law enacted by the city council of Bruges in 1683, forbidding the physicians from preparing medications for their patients.
  - ☒ 2. The development of the pharmaceutical industry since World War II led to the discovery and use of new and effective drug substances.
  - ☒ 3. The pharmacist provides advice and information; by formulating, storing, and providing correct dosage forms; and by assuring the efficacy and quality of the dispensed or supplied medicinal product.
  - ☒ 4. In Britain, Benjamin Franklin took a pivotal step in keeping the two professions separate when he appointed an apothecary to the Pennsylvania Hospital.

Question ID : 5406266793



**Comprehension:**

Read the following information carefully and answer the given questions.

The beginnings of pharmacy are ancient. When the first person expressed juice from a succulent leaf to apply to a wound, this art was being practiced. In the Greek legend, Asclepius, the god of the healing art, delegated to Hygieia the duty of compounding his remedies. She was his apothecary or pharmacist. The physician-priests of Egypt were divided into two classes: those who visited the sick and those who remained in the temple and prepared remedies for the patients.

In ancient Greece and Rome and during the Middle Ages in Europe, the art of healing recognized a separation between the duties of the physician and those of the herbalist, who supplied the physician with the raw materials from which to make medicines. The Arabian influence in Europe during the 8th century AD, however, brought about the practice of separate duties for the pharmacist and physician. The trend toward specialization was later reinforced by a law enacted by the city council of Bruges in 1683, forbidding physicians to prepare medications for their patients. In America, Benjamin Franklin took a pivotal step in keeping the two professions separate when he appointed an apothecary to the Pennsylvania Hospital. The development of the pharmaceutical industry since World War II led to the discovery and use of new and effective drug substances. It also changed the role of the pharmacist. The scope for extemporaneous compounding of medicines was much diminished and with it the need for the manipulative skills that were previously applied by the pharmacist to the preparation of bougies, cachets, pills, plasters, and potions. The pharmacist continues, however, to fulfill the prescriber's intentions by providing advice and information; by formulating, storing, and providing correct dosage forms; and by assuring the efficacy and quality of the dispensed or supplied medicinal product.

**SubQuestion No : 20**

**Q.20** The aptest title for the passage is:

- Ans
- ☒ 1. Pharmacies: From B.C. to 2000's
  - ☒ 2. Importance of Pharmacy
  - ☒ 3. History Of Pharmacy
  - ☒ 4. Pharmacies in WWII

Question ID : 5406266790

**Section : Hindi Language & Comprehension1**

**Q.1** निम्नलिखित में से कौन सा शब्द पुल्लिंग नहीं है?

- Ans
- ☒ 1. नमक
  - ☒ 2. पीपल
  - ☒ 3. जीरा
  - ☒ 4. दाल

Question ID : 5406266812

**Q.2** दिए गए शब्द का विलोम शब्द ज्ञात कीजिए।

शीर्ष

- Ans
- ☒ 1. निशीर्ष
  - ☒ 2. शीर्ष
  - ☒ 3. अशीर्ष
  - ☒ 4. तल

Question ID : 5406266805

Q.3 निम्नलिखित में से एकवचन से बहुवचन बनाने के लिए कौन सा प्रयोग सही नहीं होगा?

- Ans
- ☒ 1. स्त्री - स्त्रियाँ
  - ☒ 2. पाठक = पाठकगण
  - ☒ 3. अधिकारी - अधिकारियों
  - ☒ 4. नारी - नारीवृंद

Question ID : 5406266813

Q.4 निम्नलिखित में से शुद्ध वर्तनी का चयन कीजिए।

- Ans
- ☒ 1. अन्तर्देशीय
  - ☒ 2. अन्तर्देशीय
  - ☒ 3. अंतर्देशीय
  - ☒ 4. अन्तर्देशीय

Question ID : 5406266806

Q.5 दिए गए शब्द का समास ज्ञात कीजिए।

नेत्रहीन

- Ans
- ☒ 1. अव्ययी भाव समास
  - ☒ 2. कर्मधारय समास
  - ☒ 3. द्विगु समास
  - ☒ 4. तत्पुरुष समास

Question ID : 5406266796

Q.6 निम्नलिखित में से किसमें दिए गए प्रत्यय का उपयोग नहीं किया गया है, ज्ञात कीजिए।

आवा

- Ans
- ☒ 1. भुलावा
  - ☒ 2. चढ़ावा
  - ☒ 3. लावा
  - ☒ 4. दिखावा

Question ID : 5406266797

Q.7 दिए गए शब्द का पर्यायवाची ज्ञात कीजिए।

प्रसून

- Ans
- ☒ 1. चन्द्रमा
  - ☒ 2. लपट
  - ☒ 3. पुष्प
  - ☒ 4. वृक्ष

Question ID : 5406266804

Q.8 दिए गए वाक्य में रिक्त स्थान की पूर्ति कीजिए।

ईश्वर के यहाँ कुछ लोग दूसरों की \_\_\_\_\_ में जल्दी पहुँचते हैं।

- Ans
- ☒ 1. घृणा
  - ☒ 2. तुलना
  - ☒ 3. नफरत
  - ☒ 4. इंतजार

Question ID : 5406266809

Q.9 दिए गए वाक्य में विशेष्य ज्ञात कीजिए।

वह श्रेष्ठ उपासक है।

- Ans
- ☒ 1. वह
  - ☒ 2. है
  - ☒ 3. श्रेष्ठ
  - ☒ 4. उपासक

Question ID : 5406266801

Q.10 दिए गए शब्द का संधि विच्छेद कीजिए।

उच्चारण

- Ans
- ☒ 1. उच + चारण
  - ☒ 2. उच् + चारण
  - ☒ 3. उ + चारण
  - ☒ 4. उत् + चारण

Question ID : 5406266795

Q.11 'हार' शब्द किस उपसर्ग से जुड़कर 'भोजन' अर्थ देता है?

- Ans
- ☒ 1. अति
  - ☒ 2. खा
  - ☒ 3. प्र
  - ☒ 4. आ

Question ID : 5406266798

Q.12 दिए गए वाक्यांश के लिए उचित शब्द का चयन कीजिए।

जिसके नेत्र मछली के नेत्रों के समान हो

- Ans
- ☒ 1. नेत्रमीन
  - ☒ 2. मछलीचक्षु
  - ☒ 3. मनिनेत्र
  - ☒ 4. मीनाक्षी

Question ID : 5406266807

Q.13 निम्नलिखित में से देशज शब्द ज्ञात कीजिए।

- Ans
- ☒ 1. परोपकार
  - ☒ 2. छलछल
  - ☒ 3. प्रसन्न
  - ☒ 4. पुष्कल

Question ID : 5406266803

Q.14 निम्नलिखित में से कौन सी भाववाचक संज्ञा नहीं है?

- Ans
- ☒ 1. सर्वस्व
  - ☒ 2. आदमियता
  - ☒ 3. पराया
  - ☒ 4. पशुता

Question ID : 5406266799

Q.15 दिए गए वाक्य में रिक्त स्थान की पूर्ति कीजिए।

मेज का \_\_\_\_\_ गोल है।

- Ans
- ☒ 1. आकरा
  - ☒ 2. अकार
  - ☒ 3. कर
  - ☒ 4. आकार

Question ID : 5406266811

Q.16 निम्नलिखित में से शुद्ध वाक्य ज्ञात कीजिए।

- Ans
- ☒ 1. साहित्य और जीवन का अभिन्न संबंध है।
  - ☒ 2. बन्दुक एक बहुत ही उपयोगी शस्त्र है।
  - ☒ 3. कई रेलवे के कर्मचारियों की गिरफ्तारी हुई?
  - ☒ 4. वह गीत को दो-चार लड़ियाँ गाती है।

Question ID : 5406266814

Q.17 दिए गए वाक्य में सर्वनाम का प्रकार ज्ञात कीजिए।

वह अपने नाना के घर जा रहा है।

- Ans
- ☒ 1. निश्चयवाचक
  - ☒ 2. प्रश्नवाचक
  - ☒ 3. निजवाचक
  - ☒ 4. अनिश्चयवाचक

Question ID : 5406266800

Q.18 दिए गए वाक्य में क्रिया ज्ञात कीजिए।

गाय बछड़े को दूध पिला रही है।

- Ans
- ☒ 1. यौगिक
  - ☒ 2. द्विकर्मक
  - ☒ 3. सकर्मक
  - ☒ 4. संयुक्त

Question ID : 5406266802

Q.19 निम्नलिखित में से कौन सा शब्द युग्म सही नहीं है?

- Ans
- ☒ 1. जलज-जलद = कमल-हवा
  - ☒ 2. वृन्द-वृंत = समूह-डंठल
  - ☒ 3. कृतज्ञ-कृतघ्न = उपकार मानने वाला-उपकार न मानने वाला
  - ☒ 4. व्याधि- = शिकारी-रोग

Question ID : 5406266810

Q.20 दिए गए शब्द का विलोम शब्द ज्ञात कीजिए।

उत्कर्ष

- Ans
- ☒ 1. उत्थान
  - ☒ 2. विस्थापन
  - ☒ 3. अपकर्ष
  - ☒ 4. असकर्ष

Question ID : 5406266808

Section : Hindi Language & Comprehension2

Q.1 दिए गए शब्दों के समूह के लिए उचित लोकोक्ति का चयन कीजिए।

अन्धी पीसे कुत्ते खार्ये

- Ans
- ☒ 1. अंधे असहाय होते हैं।
  - ☒ 2. अंधे व्यक्तियों से लाभ उठना।
  - ☒ 3. कुत्ते पीसा हुआ खाते हैं।
  - ☒ 4. कुप्रबंध से वस्तु नष्ट होती है।

Question ID : 5406266829

Q.2 निम्नलिखित में से कौन सा वाक्य संयुक्त वाक्य का उदाहरण है?

- Ans
- ☒ 1. उसने अपनी बीमारी की बात अपनी शादी के बाद बताई।
  - ☒ 2. बच्चे ने सड़ा हुआ अमरूद खाया।
  - ☒ 3. मेरे साथ आगरा घूमने चलो।
  - ☒ 4. लड़का बीमार था इसलिए वह अस्पताल गया।

Question ID : 5406266820

Q.3 दिए गए वाक्य में राधा किस पुरुष का उदाहरण है, ज्ञात कीजिए।

राधा बहुत बोलती है।

- Ans
- ☒ 1. प्रथम
  - ☒ 2. अन्य
  - ☒ 3. उत्तम
  - ☒ 4. मध्यम

Question ID : 5406266816

Q.4 दिए गए वाक्य का वाच्य ज्ञात कीजिए।

भावना ने पौधों को सींचा।

- Ans
- ☒ 1. कर्तरि प्रयोग
  - ☒ 2. कर्तृवाच्य
  - ☒ 3. कर्मवाच्य
  - ☒ 4. भाववाच्य

Question ID : 5406266819

Q.5 निम्नलिखित प्रश्न में, दिए गए चार विकल्पों में से, उस विकल्प का चयन करें जो दिए गए मुहावरे के अर्थ को सर्वश्रेष्ठ रूप से व्यक्त करता है।

सब्ज बाग दिखाना

- Ans
- ☒ 1. प्रलोभन देना
  - ☒ 2. भयभीत करना
  - ☒ 3. सब्जी पैदा करना
  - ☒ 4. बाग में घूमने जाना

Question ID : 5406266821

Q.6 दी गई कहावत का अर्थ ज्ञात कीजिए।

जिस हांडी में खाना उसी में छेद करना

- Ans
- ☒ 1. उपकार करने वाला का मूर्ख बनाना
  - ☒ 2. विश्वासघात करना
  - ☒ 3. हांडी में छेद करके खाना
  - ☒ 4. अपना काम स्वयं बिगाड़ना

Question ID : 5406266823



Q.7 निम्नलिखित में से कौन सा निश्चियार्थक वृत्ति का उदाहरण है?

- Ans
- ☒ 1. यदि तुम समय पर पढ़ते तो पास हो जाते।
  - ☒ 2. मेरे आने तक कपड़े धो देना।
  - ☒ 3. तुम्हें गाड़ी बिल्कुल नहीं मिलेगी।
  - ☒ 4. वह खाना बना सकता है।

Question ID : 5406266818

Q.8 दिए गए वाक्य का काल ज्ञात कीजिए।

यदि वर्षा होती तो समय पर फसलें पक जाती।

- Ans
- ☒ 1. संदिग्ध भूतकाल
  - ☒ 2. हेतु हेतु मद भूतकाल
  - ☒ 3. अपूर्ण भूतकाल
  - ☒ 4. सामान्य भूतकाल

Question ID : 5406266815

Q.9 दिए गए वाक्य में किस विराम चिह्न का उपयोग किया जाएगा, उसका चयन कीजिए।

इतनी सुबह-सुबह तुम कहाँ चल दिए

- Ans
- ☒ 1. योजक चिह्न
  - ☒ 2. प्रश्नवाचक
  - ☒ 3. कोष्ठक
  - ☒ 4. पूर्णविराम

Question ID : 5406266826

Q.10 दिए गए वाक्य में किन विराम चिह्नों का उपयोग किया जाएगा, उनका चयन कीजिए।

अरे वह चली गई

- Ans
- ☒ 1. !, |
  - ☒ 2. !, ?
  - ☒ 3. !, !
  - ☒ 4. ?, !

Question ID : 5406266824

Q.11 दिए गए विराम चिह्न के प्रकार की पहचान कीजिए।

o

- Ans
- ☒ 1. उद्धरण
  - ☒ 2. अल्पविराम
  - ☒ 3. लाघव
  - ☒ 4. कोष्ठक

Question ID : 5406266825

Q.12 दिए गए वाक्य का पक्ष ज्ञात कीजिए।

तारे चमकते हैं।

- Ans
- ☒ 1. स्थियात्मक पक्ष
  - ☒ 2. सातत्य बोधक पक्ष
  - ☒ 3. नित्य पक्ष
  - ☒ 4. अपूर्ण पक्ष

Question ID : 5406266817

Q.13 निम्नलिखित प्रश्न में, दिए गए चार विकल्पों में से, उस विकल्प का चयन करें जो दिए गए मुहावरे के अर्थ को सर्वश्रेष्ठ रूप से व्यक्त करता है।

सिर से पानी गुजर जाना

- Ans
- ☒ 1. किसी कार्य की अधिकता होना
  - ☒ 2. गहरे पानी में स्नान करना
  - ☒ 3. बहुत अधिक हानि होना
  - ☒ 4. पानी में डुब जाना

Question ID : 5406266822

Q.14 दिए गए शब्दों के समूह के लिए उचित लोकोक्ति का चयन कीजिए।

सदा एक जैसा रहना

- Ans
- ☒ 1. ढाक के तीन पात
  - ☒ 2. लेना एक न देना दो
  - ☒ 3. ढोल में पोल
  - ☒ 4. यथा राज तथा प्रजा

Question ID : 5406266828

Q.15 निम्नलिखित प्रश्न में, दिए गए चार विकल्पों में से, उस विकल्प का चयन करें जो दिए गए मुहावरे के अर्थ को सर्वश्रेष्ठ रूप से व्यक्त करता है।

चमड़ी जाए पर दमड़ी न जाय

- Ans
- ☒ 1. कठोर श्रम करना
  - ☒ 2. सदा गरीबी में रहना
  - ☒ 3. बहुत कंजूस होना
  - ☒ 4. धन को तुच्छ समझना

Question ID : 5406266827





**Comprehension:**

गद्यांश को ध्यानपूर्वक पढ़ें और दिए गए प्रश्नों के उत्तर दें।

बहुत पहले रहीम जी ने कहा था, “रहिमन बिगरे दूध को मथे न माखन होय”। दूध के बिगड़ने से पूर्व ही उसमें से मक्खन निकाल लें इसमें ही हमारी बुद्धिमत्ता है; क्योंकि इसके बिगड़ने पर तो उसमें से मक्खन निकालने का प्रयास एकमात्र शक्ति का अपव्यय होगा अंग्रेजी में भी-गर्म लोहे को पीटकर उसे रूचि के अनुसार रूप देने की बात कही गई है। उसके ठंडा होने पर वह टूट सकता है; किंतु हमारा इच्छित रूप प्राप्त नहीं कर सकता और फिर बाद में पछताने से होता ही क्या है? हमारे पश्चाताप से वर्तमान भूत को प्रत्यक्ष नहीं कर सकता, जिससे हम उसमें आवश्यक सुधार कर सके अपितु मनस्ताप एवं खेद के साथ साथ हमारा वर्तमान भी तित्त हो उठता है पूर्व सावधानी ही इस तित्तता से बचें रहने का अन्यतम उपाय है। व्यक्ति और राष्ट्र में व्यक्ति और समष्टि का भाव निहित है। जो बात व्यक्ति के लिए हितकर है, सिद्धांततः के लिए घातक बन जाए, ऐसा कोई नियम नहीं है। समय पर ही कार्य करने की उपादेयता जहाँ व्यक्तिगत जीवन में अत्यंत महत्वपूर्ण है, वहाँ राष्ट्रीय जीवन के लिए भी उसका औचित्य एवं महत्व असंदिग्ध है हम देखते हैं कि राष्ट्र की अनेक योजनाएं यदि समय के अनुसार कार्यान्वित नहीं होती हैं तो कालांतर में वे निर्मूल्य हो जाती हैं। अतः उन सभी योजनाओं को उन सभी राष्ट्रोपयोगी कार्यों के समय की परख करते हुए, समय की उपादेयता की दृष्टि में रखते हुए ही करना हितकर है। आचार्य शंकर के मत में जो व्यक्ति समय पर बोलने में या सुनने में समर्थ नहीं वह वास्तव में मूक व बधिर अर्थात् असमर्थ और असफल है।

**SubQuestion No : 16**

**Q.16 लोहा गर्म होने पर क्या होता है?**

- Ans  1. अपनी पसन्द का आकार दे सकते हैं।
-  2. मक्खन बन जाता है।
-  3. इससे हाथ रोक सकते हैं।
-  4. वह टूट जाता है।

Question ID : 5406266832

**Comprehension:**





गद्यांश को ध्यानपूर्वक पढ़ें और दिए गए प्रश्नों के उत्तर दें।

बहुत पहले रहीम जी ने कहा था, “रहिमन बिगरे दूध को मथे न माखन होय”। दूध के बिगड़ने से पूर्व ही उसमें से मक्खन निकाल लें इसमें ही हमारी बुद्धिमत्ता है; क्योंकि इसके बिगड़ने पर तो उसमें से मक्खन निकालने का प्रयास एकमात्र शक्ति का अपव्यय होगा अंग्रेजी में भी-गर्म लोहे को पीटकर उसे रूचि के अनुसार रूप देने की बात कही गई है। उसके ठंडा होने पर वह टूट सकता है; किंतु हमारा इच्छित रूप प्राप्त नहीं कर सकता और फिर बाद में पछताने से होता ही क्या है? हमारे पश्चाताप से वर्तमान भूत को प्रत्यक्ष नहीं कर सकता, जिससे हम उसमें आवश्यक सुधार कर सके अपितु मनस्ताप एवं खेद के साथ साथ हमारा वर्तमान भी तित्त हो उठता है पूर्व सावधानी ही इस तित्तता से बचें रहने का अन्यतम उपाय है। व्यक्ति और राष्ट्र में व्यक्ति और समष्टि का भाव निहित है। जो बात व्यक्ति के लिए हितकर है, सिद्धांततः के लिए घातक बन जाए, ऐसा कोई नियम नहीं है। समय पर ही कार्य करने की उपादेयता जहाँ व्यक्तिगत जीवन में अत्यंत महत्वपूर्ण है, वहाँ राष्ट्रीय जीवन के लिए भी उसका औचित्य एवं महत्व असंदिग्ध है हम देखते हैं कि राष्ट्र की अनेक योजनाएं यदि समय के अनुसार कार्यान्वित नहीं होती हैं तो कालांतर में वे निर्मूल्य हो जाती हैं। अतः उन सभी योजनाओं को उन सभी राष्ट्रोपयोगी कार्यों के समय की परख करते हुए, समय की उपादेयता की दृष्टि में रखते हुए ही करना हितकर है। आचार्य शंकर के मत में जो व्यक्ति समय पर बोलने में या सुनने में समर्थ नहीं वह वास्तव में मूक व बधिर अर्थात् असमर्थ और असफल है।

**SubQuestion No : 17**

**Q.17 दिए गए शब्दों के समूह से क्या अभिप्राय है, ज्ञात कीजिए।**

**रहिमन, बिगरे दूध को मथे न माखन होय**

- Ans  1. रहिमन जी दूध बिने मथे पी लेते हैं।
-  2. दूध खराब होने के बाद मक्खन बनाना चाहिए।
-  3. दूध के खराब होने से पहले मक्खन बना लेना चाहिए।
-  4. दूध में से मक्खन नहीं बन सकता।

Question ID : 5406266831

**Comprehension:**

गद्यांश को ध्यानपूर्वक पढ़ें और दिए गए प्रश्नों के उत्तर दें।

बहुत पहले रहीम जी ने कहा था, “रहिमन बिगरे दूध को मथे न माखन होय”। दूध के बिगड़ने से पूर्व ही उसमें से मक्खन निकाल लें इसमें ही हमारी बुद्धिमत्ता है; क्योंकि इसके बिगड़ने पर तो उसमें से मक्खन निकालने का प्रयास एकमात्र शक्ति का अपव्यय होगा अंग्रेजी में भी-गर्म लोहे को पीटकर उसे रूचि के अनुसार रूप देने की बात कही गई है। उसके ठंडा होने पर वह टूट सकता है; किंतु हमारा इच्छित रूप प्राप्त नहीं कर सकता और फिर बाद में पछताने से होता ही क्या है? हमारे पश्चाताप से वर्तमान भूत को प्रत्यक्ष नहीं कर सकता, जिससे हम उसमें आवश्यक सुधार कर सके अपितु मनस्ताप एवं खेद के साथ साथ हमारा वर्तमान भी तित्त हो उठता है पूर्व सावधानी ही इस तित्तता से बचें रहने का अन्यतम उपाय है। व्यक्ति और राष्ट्र में व्यष्टि और समष्टि का भाव निहित है। जो बात व्यष्टि के लिए हितकर है, सिद्धांततः के लिए घातक बन जाए, ऐसा कोई नियम नहीं है। समय पर ही कार्य करने की उपादेयता जहाँ व्यक्तिगत जीवन में अत्यंत महत्वपूर्ण है, वहाँ राष्ट्रीय जीवन के लिए भी उसका औचित्य एवं महत्व असंदिग्ध है हम देखते हैं कि राष्ट्र की अनेक योजनाएं यदि समय के अनुसार कार्यान्वित नहीं होती हैं तो कालांतर में वे निर्मूल्य हो जाती हैं। अतः उन सभी योजनाओं को उन सभी राष्ट्रोपयोगी कार्यों के समय की परख करते हुए, समय की उपादेयता की दृष्टि में रखते हुए ही करना हितकर है। आचार्य शंकर के मत में जो व्यक्ति समय पर बोलने में या सुनने में समर्थ नहीं वह वास्तव में मूक व बधिर अर्थात् असमर्थ और असफल है।

**SubQuestion No : 18**

**Q.18 दी गई पंक्ति का आशय स्पष्ट कीजिए।**

**पश्चाताप से वर्तमान भूत को प्रत्यक्ष नहीं कर सकता**

- Ans
- ☒ 1. पश्चाताप करने से इंसान शर्म से झूक जाता है।
  - ☒ 2. पश्चाताप करने से बीता हुआ समय कभी वापस नहीं आता।
  - ☒ 3. पश्चाताप करने से आने वाला समय कभी अच्छा नहीं होता।
  - ☒ 4. यह केवल रहीम का दोहा है।

Question ID : 5406266834

**Comprehension:**

गद्यांश को ध्यानपूर्वक पढ़ें और दिए गए प्रश्नों के उत्तर दें।

बहुत पहले रहीम जी ने कहा था, “रहिमन बिगरे दूध को मथे न माखन होय”। दूध के बिगड़ने से पूर्व ही उसमें से मक्खन निकाल लें इसमें ही हमारी बुद्धिमत्ता है; क्योंकि इसके बिगड़ने पर तो उसमें से मक्खन निकालने का प्रयास एकमात्र शक्ति का अपव्यय होगा अंग्रेजी में भी-गर्म लोहे को पीटकर उसे रूचि के अनुसार रूप देने की बात कही गई है। उसके ठंडा होने पर वह टूट सकता है; किंतु हमारा इच्छित रूप प्राप्त नहीं कर सकता और फिर बाद में पछताने से होता ही क्या है? हमारे पश्चाताप से वर्तमान भूत को प्रत्यक्ष नहीं कर सकता, जिससे हम उसमें आवश्यक सुधार कर सके अपितु मनस्ताप एवं खेद के साथ साथ हमारा वर्तमान भी तित्त हो उठता है पूर्व सावधानी ही इस तित्तता से बचें रहने का अन्यतम उपाय है। व्यक्ति और राष्ट्र में व्यष्टि और समष्टि का भाव निहित है। जो बात व्यष्टि के लिए हितकर है, सिद्धांततः के लिए घातक बन जाए, ऐसा कोई नियम नहीं है। समय पर ही कार्य करने की उपादेयता जहाँ व्यक्तिगत जीवन में अत्यंत महत्वपूर्ण है, वहाँ राष्ट्रीय जीवन के लिए भी उसका औचित्य एवं महत्व असंदिग्ध है हम देखते हैं कि राष्ट्र की अनेक योजनाएं यदि समय के अनुसार कार्यान्वित नहीं होती हैं तो कालांतर में वे निर्मूल्य हो जाती हैं। अतः उन सभी योजनाओं को उन सभी राष्ट्रोपयोगी कार्यों के समय की परख करते हुए, समय की उपादेयता की दृष्टि में रखते हुए ही करना हितकर है। आचार्य शंकर के मत में जो व्यक्ति समय पर बोलने में या सुनने में समर्थ नहीं वह वास्तव में मूक व बधिर अर्थात् असमर्थ और असफल है।

**SubQuestion No : 19**

**Q.19 उपयुक्त गद्यांश का शीर्षक ज्ञात कीजिए।**

- Ans
- ☒ 1. अब पछताए होत क्या जब चिड़ियाँ चुग गई खेत
  - ☒ 2. रहीम दास की कथा
  - ☒ 3. पश्चाताप का फल
  - ☒ 4. राष्ट्रीय योजनाएँ

Question ID : 5406266835

**Comprehension:**

गद्यांश को ध्यानपूर्वक पढ़ें और दिए गए प्रश्नों के उत्तर दें।

बहुत पहले रहीम जी ने कहा था, “रहिमन बिगरे दूध को मथे न माखन होय”। दूध के बिगड़ने से पूर्व ही उसमें से मक्खन निकाल लें इसमें ही हमारी बुद्धिमत्ता है; क्योंकि इसके बिगड़ने पर तो उसमें से मक्खन निकालने का प्रयास एकमात्र शक्ति का अपव्यय होगा अंग्रेजी में भी-गर्म लोहे को पीटकर उसे रूचि के अनुसार रूप देने की बात कही गई है। उसके ठंडा होने पर वह टूट सकता है; किंतु हमारा इच्छित रूप प्राप्त नहीं कर सकता और फिर बाद में पछताने से होता ही क्या है? हमारे पश्चाताप से वर्तमान भूत को प्रत्यक्ष नहीं कर सकता, जिससे हम उसमें आवश्यक सुधार कर सके अपितु मनस्ताप एवं खेद के साथ साथ हमारा वर्तमान भी तित्त हो उठता है पूर्व सावधानी ही इस तित्तता से बचें रहने का अन्यतम उपाय है। व्यक्ति और राष्ट्र में व्यष्टि और समष्टि का भाव निहित है। जो बात व्यष्टि के लिए हितकर है, सिद्धांततः के लिए घातक बन जाए, ऐसा कोई नियम नहीं है। समय पर ही कार्य करने की उपादेयता जहाँ व्यक्तिगत जीवन में अत्यंत महत्वपूर्ण है, वहाँ राष्ट्रीय जीवन के लिए भी उसका औचित्य एवं महत्व असंदिग्ध है हम देखते हैं कि राष्ट्र की अनेक योजनाएं यदि समय के अनुसार कार्यान्वित नहीं होती हैं तो कालांतर में वे निर्मूल्य हो जाती हैं। अतः उन सभी योजनाओं को उन सभी राष्ट्रोपयोगी कार्यों के समय की परख करते हुए, समय की उपादेयता की दृष्टि में रखते हुए ही करना हितकर है। आचार्य शंकर के मत में जो व्यक्ति समय पर बोलने में या सुनने में समर्थ नहीं वह वास्तव में मूक व बधिर अर्थात् असमर्थ और असफल है।

**SubQuestion No : 20**

**Q.20** राष्ट्र की अनेक योजनाएँ फलीभूत क्यों नहीं हो पाती?

- Ans
- ☒ 1. क्योंकि वह राष्ट्रोपयोगी नहीं होती है।
  - ☒ 2. क्योंकि वह भ्रष्टाचार से ग्रस्त होती है।
  - ☒ 3. क्योंकि वह समय पर पूर्ण नहीं होती।
  - ☒ 4. क्योंकि राष्ट्र के पास पैसा नहीं है।

Question ID : 5406266833

