



Teachingninja.in



Latest Govt Job updates



Private Job updates



Free Mock tests available



Visit - teachingninja.in



Teachingninja.in

APOnline Limited

Notations :

- Options shown in **green** color and with  icon are correct.
- Options shown in **red** color and with  icon are incorrect.

Question Paper Name :	General Studies and Mental Ability DG
Subject Name :	General Studies and Mental Ability
Creation Date :	2020-09-27 12:39:20
Duration :	150
Total Marks :	150
Display Marks:	Yes
Share Answer Key With Delivery Engine :	No
Actual Answer Key :	Yes
Calculator :	None
Magnifying Glass Required? :	No
Ruler Required? :	No
Eraser Required? :	No
Scratch Pad Required? :	No
Rough Sketch/Notepad Required? :	No
Protractor Required? :	No
Show Watermark on Console? :	Yes
Highlighter :	No
Auto Save on Console? :	Yes

General Studies and Mental Ability

Group Number :	1
Group Id :	20219410
Is this Group for Examiner? :	No

General Studies and Mental Ability

Section Id :	20219410
Section Number :	1
Section type :	Online
Display Number Panel :	Yes
Group All Questions :	Yes
Mark As Answered Required? :	Yes
Sub-Section Number :	1
Sub-Section Id :	20219410
Question Shuffling Allowed :	Yes

Question Number : 1 Question Id : 2021941351 Question Type : MCQ Option Shuffling : Yes Display Question Number : Yes Is Question Mandatory : No Single Line Question Option : No Negative Marks Display Text : 1/3 Option Orientation : Vertical Correct Marks : 1 Wrong Marks : 0.33

Which Telugu cinema award was introduced to annually recognise people for their lifetime achievements and contributions to Telugu film industry?

Options :

-  Raghupathi Venkaiah Award



2. ✖ Nandi Award
3. ✖ Kala Ratna
4. ✖ NRT National Award

Question Number : 2 Question Id : 2021941352 Question Type : MCQ Option Shuffling : Yes Display Question Number : Yes Is Question Mandatory : No Single Line Question Option : No Negative Marks Display Text : 1/3 Option Orientation : Vertical Correct Marks : 1 Wrong Marks : 0.33

What is the retirement age of a High Court judge in India?

Options :

1. ✖ 61 years
2. ✔ 62 years
3. ✖ 63 years
4. ✖ 64 years

Question Number : 3 Question Id : 2021941353 Question Type : MCQ Option Shuffling : Yes Display Question Number : Yes Is Question Mandatory : No Single Line Question Option : No Negative Marks Display Text : 1/3 Option Orientation : Vertical Correct Marks : 1 Wrong Marks : 0.33

Which among the following is the standard way to measure tornadoes?

Options :

1. ✔ E.F. Scale
2. ✖ Fujita Scale
3. ✖ Beaufort Scale
4. ✖ Saffir-Simpson Hurricane Wind Scale

Question Number : 4 Question Id : 2021941354 Question Type : MCQ Option Shuffling : Yes Display Question Number : Yes Is Question Mandatory : No Single Line Question Option : No Negative Marks Display Text : 1/3 Option Orientation : Vertical Correct Marks : 1 Wrong Marks : 0.33

Whose responsibility is it to protect residents of common capital of Hyderabad?

Options :

1. ✖ Successor State of Telangana
2. ✖ Successor State of Andhra Pradesh
3. ✖ Government of India
4. ✔ Governor of the existing State of Andhra Pradesh

Question Number : 5 Question Id : 2021941355 Question Type : MCQ Option Shuffling : Yes Display Question Number : Yes Is Question Mandatory : No Single Line Question Option : No Negative Marks Display Text : 1/3 Opt



Correct Marks : 1 Wrong Marks : 0.33

Which state topped the 'Khelo India Youth Games', 2020?

Options :

1. ✓ Maharashtra
2. ✗ Haryana
3. ✗ Delhi
4. ✗ Karnataka

Question Number : 6 Question Id : 2021941356 Question Type : MCQ Option Shuffling : Yes Display Question Number : Yes Is Question Mandatory : No Single Line Question Option : No Negative Marks Display Text : 1/3 Option Orientation : Vertical Correct Marks : 1 Wrong Marks : 0.33

When will the 85th Foundation day of Reserve Bank of India be celebrated?

Options :

1. ✗ 1st February, 2021
2. ✓ 1st April, 2020
3. ✗ 1st May, 2020
4. ✗ 1st April, 2021

Question Number : 7 Question Id : 2021941357 Question Type : MCQ Option Shuffling : Yes Display Question Number : Yes Is Question Mandatory : No Single Line Question Option : No Negative Marks Display Text : 1/3 Option Orientation : Vertical Correct Marks : 1 Wrong Marks : 0.33

When was the world tallest statue 'Statue of Unity', included in the eight wonders of SCO (Shanghai Cooperation Organisation), inaugurated?

Options :

1. ✗ October, 2014
2. ✗ November, 2015
3. ✓ October, 2018
4. ✗ February, 2016

Question Number : 8 Question Id : 2021941358 Question Type : MCQ Option Shuffling : Yes Display Question Number : Yes Is Question Mandatory : No Single Line Question Option : No Negative Marks Display Text : 1/3 Option Orientation : Vertical Correct Marks : 1 Wrong Marks : 0.33

In which of the following country was the first case of novel corona virus identified?

Options :

1. ✗ Japan
2. ✗ Philippines



3. ✖ USA

4. ✔ China

Question Number : 9 Question Id : 2021941359 Question Type : MCQ Option Shuffling : Yes Display Question Number : Yes Is Question Mandatory : No Single Line Question Option : No Negative Marks Display Text : 1/3 Option Orientation : Vertical Correct Marks : 1 Wrong Marks : 0.33

Which of the following countries is the second-largest economy in the world?

Options :

1. ✖ India

2. ✖ USA

3. ✖ Japan

4. ✔ China

Question Number : 10 Question Id : 2021941360 Question Type : MCQ Option Shuffling : Yes Display Question Number : Yes Is Question Mandatory : No Single Line Question Option : No Negative Marks Display Text : 1/3 Option Orientation : Vertical Correct Marks : 1 Wrong Marks : 0.33

Which of the following forces is responsible for all the nucleons to be concentrated in the nucleus?

Options :

1. ✖ Gravitational force

2. ✔ Nuclear force

3. ✖ Electrostatic force

4. ✖ Centripetal force

Question Number : 11 Question Id : 2021941361 Question Type : MCQ Option Shuffling : Yes Display Question Number : Yes Is Question Mandatory : No Single Line Question Option : No Negative Marks Display Text : 1/3 Option Orientation : Vertical Correct Marks : 1 Wrong Marks : 0.33

Which of the following is the principle cause for a passenger to bend forward when the driver of a bus applies brakes to stop the bus?

Options :

1. ✖ Pressure

2. ✖ Momentum

3. ✖ Gravity

4. ✔ Inertia

Question Number : 12 Question Id : 2021941362 Question Type : MCQ Option Shuffling : Yes Display Question Number : Yes Is Question Mandatory : No Single Line Question Option : No Negative Marks Display Text : 1/3 Option Orientation : Vertical Correct Marks : 1 Wrong Marks : 0.33



What was the capital of the 'Andhra State' which was created in 1953?

Options :

1. ✖ Hyderabad
2. ✔ Kurnool
3. ✖ Madras
4. ✖ Kadapa

Question Number : 13 Question Id : 2021941363 Question Type : MCQ Option Shuffling : Yes Display Question Number : Yes Is Question Mandatory : No Single Line Question Option : No Negative Marks Display Text : 1/3 Option Orientation : Vertical Correct Marks : 1 Wrong Marks : 0.33

Which of the borrowed features of the Indian Constitution is from Britain?

Options :

1. ✖ Functions of President and Vice-President
2. ✖ Directive Principles of State Policy
3. ✖ Method of Election of the President
4. ✔ Cabinet System

Question Number : 14 Question Id : 2021941364 Question Type : MCQ Option Shuffling : Yes Display Question Number : Yes Is Question Mandatory : No Single Line Question Option : No Negative Marks Display Text : 1/3 Option Orientation : Vertical Correct Marks : 1 Wrong Marks : 0.33

The 'Election of members of the Rajya Sabha' of the Indian Constitution has been borrowed from which of the following countries?

Options :

1. ✖ Japan
2. ✔ South Africa
3. ✖ Germany
4. ✖ USA

Question Number : 15 Question Id : 2021941365 Question Type : MCQ Option Shuffling : Yes Display Question Number : Yes Is Question Mandatory : No Single Line Question Option : No Negative Marks Display Text : 1/3 Option Orientation : Vertical Correct Marks : 1 Wrong Marks : 0.33

Which of the following statements is TRUE?

1. The coast of the state of Andhra Pradesh extends along the Bay of Bengal from Guntur to Visakhapatnam district.
2. The coast of the state of Andhra Pradesh extends along the Bay of Bengal from Srikakulam to Nellore district.
3. The coast of the state of Andhra Pradesh extends along the Bay of Bengal from Vizianagaram to Prakasam district.
4. The coast of the state of Andhra Pradesh extends along the Bay of Bengal from Srikakulam to Visakhapatnam district.

Options :



1. ✖ Only statement 1 is true
2. ✔ Only statement 2 is true
3. ✖ Only statement 3 is true
4. ✖ Only statement 4 is true

Question Number : 16 Question Id : 2021941366 Question Type : MCQ Option Shuffling : Yes Display Question Number : Yes Is Question Mandatory : No Single Line Question Option : No Negative Marks Display Text : 1/3 Option Orientation : Vertical Correct Marks : 1 Wrong Marks : 0.33

Which among the following rivers has the second largest river basin area?

Options :

1. ✔ Godavari
2. ✖ Ganga
3. ✖ Narmada
4. ✖ Krishna

Question Number : 17 Question Id : 2021941367 Question Type : MCQ Option Shuffling : Yes Display Question Number : Yes Is Question Mandatory : No Single Line Question Option : No Negative Marks Display Text : 1/3 Option Orientation : Vertical Correct Marks : 1 Wrong Marks : 0.33

'Construction of water shed structures at right places' can be the mitigation action for which of the following disasters?

- (i) Tornadoes
- (ii) Fire
- (iii) Drought
- (iv) Flood

Options :

1. ✖ Both (i) and (iii)
2. ✖ Both (ii) and (iii)
3. ✔ Both (iii) and (iv)
4. ✖ Both (ii) and (iv)

Question Number : 18 Question Id : 2021941368 Question Type : MCQ Option Shuffling : Yes Display Question Number : Yes Is Question Mandatory : No Single Line Question Option : No Negative Marks Display Text : 1/3 Option Orientation : Vertical Correct Marks : 1 Wrong Marks : 0.33

Which of the following is/are the methods to control air pollution?

- (i) Setting up of cheaper and faster public transportation systems with better connectivity.
- (ii) Devising rules to ensure pooling of private transport.
- (iii) Setting up sound-proof infrastructure in the hospitals.

Options :

1. ✖ only (i)

- 2. ✖ only (ii)
- 3. ✔ only (i) and (ii)
- 4. ✖ only (ii) and (iii)

Question Number : 19 Question Id : 2021941369 Question Type : MCQ Option Shuffling : Yes Display Question Number : Yes Is Question Mandatory : No Single Line Question Option : No Negative Marks Display Text : 1/3 Option Orientation : Vertical Correct Marks : 1 Wrong Marks : 0.33

At the time of bifurcation of Andhra Pradesh, the Reorganisation Act contained how many 'Parts'?

Options :

- 1. ✔ 12
- 2. ✖ 15
- 3. ✖ 20
- 4. ✖ 26

Question Number : 20 Question Id : 2021941370 Question Type : MCQ Option Shuffling : Yes Display Question Number : Yes Is Question Mandatory : No Single Line Question Option : No Negative Marks Display Text : 1/3 Option Orientation : Vertical Correct Marks : 1 Wrong Marks : 0.33

The Andhra Pradesh Reorganisation Act contains how many 'Sections'?

Options :

- 1. ✖ 75
- 2. ✖ 95
- 3. ✖ 102
- 4. ✔ 108

Question Number : 21 Question Id : 2021941371 Question Type : MCQ Option Shuffling : Yes Display Question Number : Yes Is Question Mandatory : No Single Line Question Option : No Negative Marks Display Text : 1/3 Option Orientation : Vertical Correct Marks : 1 Wrong Marks : 0.33

According to the Andhra Pradesh Reorganisation Act, the expenditure with respect to salaries of the judges of the common High Court of Andhra Pradesh and Telangana shall be allocated amongst the two states on what basis?

Options :

- 1. ✔ Population Ratio
- 2. ✖ Geographical location of the Court
- 3. ✖ Decision of Central Government
- 4. ✖ Decision of the Governor

Question Number : 22 Question Id : 2021941372 Question Type : MCQ Option Shuffling : Yes Display Question Number : Yes Is Question Mandatory : No Single Line Question Option : No Negative Marks Display Text : 1/3 Option Orientation : Vertical Correct Marks : 1 Wrong Marks : 0.33

The NCMC (National Crisis Management Committee) of the Government of India is headed by the:

Options :

1. ✖ Chief Justice of the Supreme Court
2. ✖ Home Minister
3. ✖ Prime Minister
4. ✔ Cabinet Secretary

Question Number : 23 Question Id : 2021941373 Question Type : MCQ Option Shuffling : Yes Display Question Number : Yes Is Question Mandatory : No Single Line Question Option : No Negative Marks Display Text : 1/3 Option Orientation : Vertical Correct Marks : 1 Wrong Marks : 0.33

What is the full form of 'MAT' in the disaster management cycle?

Options :

1. ✖ Mitigation Assurance Test
2. ✖ Mitigation Assurance Task
3. ✖ Mitigation Assessment Test
4. ✔ Mitigation Assessment Team

Question Number : 24 Question Id : 2021941374 Question Type : MCQ Option Shuffling : Yes Display Question Number : Yes Is Question Mandatory : No Single Line Question Option : No Negative Marks Display Text : 1/3 Option Orientation : Vertical Correct Marks : 1 Wrong Marks : 0.33

Risk assessment comes in which part of the disaster management cycle?

Options :

1. ✖ Response
2. ✖ Recovery
3. ✔ Mitigation
4. ✖ Development

Question Number : 25 Question Id : 2021941375 Question Type : MCQ Option Shuffling : Yes Display Question Number : Yes Is Question Mandatory : No Single Line Question Option : No Negative Marks Display Text : 1/3 Option Orientation : Vertical Correct Marks : 1 Wrong Marks : 0.33

Which of the following statements is CORRECT about the 'Disaster Crunch Model'?

Options :

1. ✔ Vulnerability is rooted in socio-economic processes.
2. ✖ Vulnerability is in the minds of people.

3. ✖ Vulnerability is needed to address the problem.
4. ✖ Vulnerability is chance based.

Question Number : 26 Question Id : 2021941376 Question Type : MCQ Option Shuffling : Yes Display Question Number : Yes Is Question Mandatory : No Single Line Question Option : No Negative Marks Display Text : 1/3 Option Orientation : Vertical Correct Marks : 1 Wrong Marks : 0.33

'Mine flooding' falls under which type of disaster?

Options :

1. ✖ Geological disaster
2. ✔ Accidentrelated disaster
3. ✖ Chemical, industrial and nuclearrelated disasters
4. ✖ Water and climate relateddisasters

Question Number : 27 Question Id : 2021941377 Question Type : MCQ Option Shuffling : Yes Display Question Number : Yes Is Question Mandatory : No Single Line Question Option : No Negative Marks Display Text : 1/3 Option Orientation : Vertical Correct Marks : 1 Wrong Marks : 0.33

What percent of the landmass of India is prone to earthquakes of moderate to very high intensity?

Options :

1. ✖ 44.3%
2. ✖ 49.6%
3. ✖ 51.3%
4. ✔ 58.6%

Question Number : 28 Question Id : 2021941378 Question Type : MCQ Option Shuffling : Yes Display Question Number : Yes Is Question Mandatory : No Single Line Question Option : No Negative Marks Display Text : 1/3 Option Orientation : Vertical Correct Marks : 1 Wrong Marks : 0.33

HAZOP study is related to which of the following?

Options :

1. ✔ The assessment on adequacy of safety measures
2. ✖ GIS assessment for natural calamity
3. ✖ The assessment of accident related disasters
4. ✖ The assessment of global vulnerability profile

Question Number : 29 Question Id : 2021941379 Question Type : MCQ Option Shuffling : Yes Display Question Number : Yes Is Question Mandatory : No Single Line Question Option : No Negative Marks Display Text : 1/3 Option Orientation : Vertical Correct Marks : 1 Wrong Marks : 0.33



What is a hydrological drought?

Options :

1. ✖ Lack of precipitation
2. ✖ Lack of soil moisture
3. ✔ Reduced streamflow
4. ✖ Lack of rain

Question Number : 30 Question Id : 2021941380 Question Type : MCQ Option Shuffling : Yes Display Question Number : Yes Is Question Mandatory : No Single Line Question Option : No Negative Marks Display Text : 1/3 Option Orientation : Vertical Correct Marks : 1 Wrong Marks : 0.33

In disaster management, non-structural mitigation involves:

Options :

1. ✖ relocation
2. ✔ community awareness and education programs
3. ✖ detection systems
4. ✖ treatment systems

Question Number : 31 Question Id : 2021941381 Question Type : MCQ Option Shuffling : Yes Display Question Number : Yes Is Question Mandatory : No Single Line Question Option : No Negative Marks Display Text : 1/3 Option Orientation : Vertical Correct Marks : 1 Wrong Marks : 0.33

Trophic levels of an ecosystem can be expressed in:

Options :

1. ✖ ecological maps
2. ✖ ecological graphs
3. ✖ ecological nets
4. ✔ ecological pyramids

Question Number : 32 Question Id : 2021941382 Question Type : MCQ Option Shuffling : Yes Display Question Number : Yes Is Question Mandatory : No Single Line Question Option : No Negative Marks Display Text : 1/3 Option Orientation : Vertical Correct Marks : 1 Wrong Marks : 0.33

Which of the following is an example of a 'herbivore'?

Options :

1. ✖ Lion
2. ✖ Fish
3. ✖ Phytoplankton

4. ✓ Zooplankton

Question Number : 33 Question Id : 2021941383 Question Type : MCQ Option Shuffling : Yes Display Question Number : Yes Is Question Mandatory : No Single Line Question Option : No Negative Marks Display Text : 1/3 Option Orientation : Vertical Correct Marks : 1 Wrong Marks : 0.33

Which of the following is the CORRECT sequence of flow of energy in an ecosystem?

Options :

1. ✓ Sunlight → Producers → Herbivores → Carnivores
2. ✗ Sunlight → Herbivores → Carnivores → Producers
3. ✗ Sunlight → Producers → Carnivores → Herbivores
4. ✗ Sunlight → Herbivores → Producers → Carnivores

Question Number : 34 Question Id : 2021941384 Question Type : MCQ Option Shuffling : Yes Display Question Number : Yes Is Question Mandatory : No Single Line Question Option : No Negative Marks Display Text : 1/3 Option Orientation : Vertical Correct Marks : 1 Wrong Marks : 0.33

The Ramsar Convention is related to:

Options :

1. ✗ oceans
2. ✓ wetlands
3. ✗ deserts
4. ✗ ozone depletion

Question Number : 35 Question Id : 2021941385 Question Type : MCQ Option Shuffling : Yes Display Question Number : Yes Is Question Mandatory : No Single Line Question Option : No Negative Marks Display Text : 1/3 Option Orientation : Vertical Correct Marks : 1 Wrong Marks : 0.33

What happens in eutrophication?

Options :

1. ✓ Increased load of nutrients
2. ✗ Decrease in algal populations
3. ✗ Excessive fluoride concentration
4. ✗ Excessive lead concentration

Question Number : 36 Question Id : 2021941386 Question Type : MCQ Option Shuffling : Yes Display Question Number : Yes Is Question Mandatory : No Single Line Question Option : No Negative Marks Display Text : 1/3 Option Orientation : Vertical Correct Marks : 1 Wrong Marks : 0.33

In September 2015, the UN General Assembly adopted the 2030 Agenda for Sustainable Development that includes _____ Sustainable Development Goals (SDGs).

Options :

1. ✓ 17

2. ✗ 11

3. ✗ 13

4. ✗ 15

Question Number : 37 Question Id : 2021941387 Question Type : MCQ Option Shuffling : Yes Display Question Number : Yes Is Question Mandatory : No Single Line Question Option : No Negative Marks Display Text : 1/3 Option Orientation : Vertical Correct Marks : 1 Wrong Marks : 0.33

A new species of fish named 'Schizothorax Sikusirumensis' has been discovered in which state?

Options :

1. ✗ Rajasthan

2. ✗ Telangana

3. ✗ Bihar

4. ✓ Arunachal Pradesh

Question Number : 38 Question Id : 2021941388 Question Type : MCQ Option Shuffling : Yes Display Question Number : Yes Is Question Mandatory : No Single Line Question Option : No Negative Marks Display Text : 1/3 Option Orientation : Vertical Correct Marks : 1 Wrong Marks : 0.33

Which of the following is NOT an objective of the 'Appiko Movement'?

Options :

1. ✗ Save the Western Ghats

2. ✗ Attempt to restore the greenery to denuded areas

3. ✗ Strive to propagate the idea of rational utilisation of forest resources

4. ✓ Strive to clean the rivers and oceans from pollutants

Question Number : 39 Question Id : 2021941389 Question Type : MCQ Option Shuffling : Yes Display Question Number : Yes Is Question Mandatory : No Single Line Question Option : No Negative Marks Display Text : 1/3 Option Orientation : Vertical Correct Marks : 1 Wrong Marks : 0.33

The sentence "The battle to feed all of humanity is over" appears in the book:

Options :

1. ✓ 'The Population Bomb' by Paul R Ehrlich

2. ✗ 'An Essay on the Principle of Population' by Thomas Malthus

3. ✗ 'The Sixth Extinction: An Unnatural History' by Elizabeth Kolbert

4. ✗ 'The Population Explosion' by Paul R Ehrlich and Anne H Ehrlich



Question Number : 40 Question Id : 2021941390 Question Type : MCQ Option Shuffling : Yes Display Question Number : Yes Is Question Mandatory : No Single Line Question Option : No Negative Marks Display Text : 1/3 Option Orientation : Vertical Correct Marks : 1 Wrong Marks : 0.33

'The Limits to Growth' by Donella Meadows and colleagues conceptualises:

Options :

1. ✖ the relationship between pollution and farming.
2. ✖ that economic growth would exhaust oil supplies during the twenty-first century.
3. ✔ that interactions between population, resources, and pollution would limit economic growth.
4. ✖ that population, when unchecked, increases in a geometrical ratio.

Question Number : 41 Question Id : 2021941391 Question Type : MCQ Option Shuffling : Yes Display Question Number : Yes Is Question Mandatory : No Single Line Question Option : No Negative Marks Display Text : 1/3 Option Orientation : Vertical Correct Marks : 1 Wrong Marks : 0.33

Which country was to host the 12th BRICS summit in July 2020, which has been postponed due to the COVID19 pandemic?

Options :

1. ✖ Japan
2. ✖ China
3. ✖ Brazil
4. ✔ Russia

Question Number : 42 Question Id : 2021941392 Question Type : MCQ Option Shuffling : Yes Display Question Number : Yes Is Question Mandatory : No Single Line Question Option : No Negative Marks Display Text : 1/3 Option Orientation : Vertical Correct Marks : 1 Wrong Marks : 0.33

Which Indian city had got the title of the cleanest city by the Ministry of Housing and Urban Affairs (MoHUA), Government of India, on 31st December, 2019 (among the cities which have a population of more than 10 lac)?

Options :

1. ✖ Madurai
2. ✔ Indore
3. ✖ Lucknow
4. ✖ Pune

Question Number : 43 Question Id : 2021941393 Question Type : MCQ Option Shuffling : Yes Display Question Number : Yes Is Question Mandatory : No Single Line Question Option : No Negative Marks Display Text : 1/3 Option Orientation : Vertical Correct Marks : 1 Wrong Marks : 0.33

In which Indian city was DefExpo 2020 inaugurated by the Prime Minister?

Options :

1. ✖ Jammu

2. ✓ Lucknow
3. ✗ Chandigarh
4. ✗ Delhi

Question Number : 44 Question Id : 2021941394 Question Type : MCQ Option Shuffling : Yes Display Question Number : Yes Is Question Mandatory : No Single Line Question Option : No Negative Marks Display Text : 1/3 Option Orientation : Vertical Correct Marks : 1 Wrong Marks : 0.33

NASA announced a mission in March 2020 to study how the Sun creates giant solar particle storms. The name of the mission is:

Options :

1. ✗ Black Star Space Experiment
2. ✗ Gingiva + Space Experiment
3. ✓ Sun Radio Interferometer Space Experiment
4. ✗ Mark 1 Solar Space Experiment

Question Number : 45 Question Id : 2021941395 Question Type : MCQ Option Shuffling : Yes Display Question Number : Yes Is Question Mandatory : No Single Line Question Option : No Negative Marks Display Text : 1/3 Option Orientation : Vertical Correct Marks : 1 Wrong Marks : 0.33

Where was the 50th International Film Festival of India held?

Options :

1. ✗ Mumbai
2. ✗ Chandigarh
3. ✗ Kolkata
4. ✓ Panaji

Question Number : 46 Question Id : 2021941396 Question Type : MCQ Option Shuffling : Yes Display Question Number : Yes Is Question Mandatory : No Single Line Question Option : No Negative Marks Display Text : 1/3 Option Orientation : Vertical Correct Marks : 1 Wrong Marks : 0.33

Which Indian satellite was launched on 27th November, 2019 by ISRO from the Sriharikota centre for the purpose of geographical research and studies?

Options :

1. ✗ GSAT-7A
2. ✗ RISAT-2B
3. ✓ CARTOSAT-3
4. ✗ GSAT-29

Question Number : 47 Question Id : 2021941397 Question Type : MCQ Option Shuffling : Yes Display Question Number : Yes Is Question Mandatory : No Single Line Question Option : No Negative Marks Display Text : 1/3 Option Orientation : Vertical Correct Marks : 1 Wrong Marks : 0.33

When was India's first satellite launched?

Options :

1. ✖ 21st May, 1960
2. ✖ 25th January, 1950
3. ✖ 13th July, 1990
4. ✔ 19th April, 1975

Question Number : 48 Question Id : 2021941398 Question Type : MCQ Option Shuffling : Yes Display Question Number : Yes Is Question Mandatory : No Single Line Question Option : No Negative Marks Display Text : 1/3 Option Orientation : Vertical Correct Marks : 1 Wrong Marks : 0.33

Where did the first Commonwealth games take place?

Options :

1. ✖ Athens, Greece
2. ✖ London, United Kingdom
3. ✔ Hamilton, Canada
4. ✖ New Delhi, India

Question Number : 49 Question Id : 2021941399 Question Type : MCQ Option Shuffling : Yes Display Question Number : Yes Is Question Mandatory : No Single Line Question Option : No Negative Marks Display Text : 1/3 Option Orientation : Vertical Correct Marks : 1 Wrong Marks : 0.33

In which year did the Simon Commission arrive in India?

Options :

1. ✖ 1911
2. ✖ 1932
3. ✔ 1928
4. ✖ 1947

Question Number : 50 Question Id : 2021941400 Question Type : MCQ Option Shuffling : Yes Display Question Number : Yes Is Question Mandatory : No Single Line Question Option : No Negative Marks Display Text : 1/3 Option Orientation : Vertical Correct Marks : 1 Wrong Marks : 0.33

Sultan Qaboos Bin Said Al Said, who died in January 2020, belonged to:

Options :

1. ✖ Qatar

- 2. ✓ Oman
- 3. ✗ Turkey
- 4. ✗ Iran

Question Number : 51 Question Id : 2021941401 Question Type : MCQ Option Shuffling : Yes Display Question Number : Yes Is Question Mandatory : No Single Line Question Option : No Negative Marks Display Text : 1/3 Option Orientation : Vertical Correct Marks : 1 Wrong Marks : 0.33

Which of the following famous cricketers was selected for 'Leading Cricketer in the World' in 2019 by the cricket magazine 'Wisden'?

Options :

- 1. ✗ Virat Kohli
- 2. ✗ Steve Smith
- 3. ✓ Ben Stokes
- 4. ✗ Kane Williamson

Question Number : 52 Question Id : 2021941402 Question Type : MCQ Option Shuffling : Yes Display Question Number : Yes Is Question Mandatory : No Single Line Question Option : No Negative Marks Display Text : 1/3 Option Orientation : Vertical Correct Marks : 1 Wrong Marks : 0.33

Which of the following movies won the 'Best Feature Film' title at the 66th National Film Awards 2019?

Options :

- 1. ✗ Uri
- 2. ✗ Mahanati
- 3. ✗ Nagarkirtan
- 4. ✓ Hellaro

Question Number : 53 Question Id : 2021941403 Question Type : MCQ Option Shuffling : Yes Display Question Number : Yes Is Question Mandatory : No Single Line Question Option : No Negative Marks Display Text : 1/3 Option Orientation : Vertical Correct Marks : 1 Wrong Marks : 0.33

Who took the oath as the 47th Chief Justice of India recent November 2019?

Options :

- 1. ✗ Ranjan Gogoi
- 2. ✗ Jagdish Singh Khehar
- 3. ✓ Sharad Arvind Bobde
- 4. ✗ T.S. Thakur

Question Number : 54 Question Id : 2021941404 Question Type : MCQ Option Shuffling : Yes Display Question Number : Yes Is



Question Mandatory : No Single Line Question Option : No Negative Marks Display Text : 1/3 Option Orientation : Vertical
Correct Marks : 1 Wrong Marks : 0.33

Who among the following was conferred with the Padma Vibhushan Award, 2020 for excellence in the field of sports?

Options :

1. ✓ M.C. Mary Kom
2. ✗ Pankaj Advani
3. ✗ Sunil Chhetri
4. ✗ Mirabai Chanu

Question Number : 55 Question Id : 2021941405 Question Type : MCQ Option Shuffling : Yes Display Question Number : Yes Is
Question Mandatory : No Single Line Question Option : No Negative Marks Display Text : 1/3 Option Orientation : Vertical
Correct Marks : 1 Wrong Marks : 0.33

Which Indian state initiated the 'Mo Jeeban' programme for containment of the COVID-19 pandemic?

Options :

1. ✓ Odisha
2. ✗ Arunachal Pradesh
3. ✗ West Bengal
4. ✗ Jharkhand

Question Number : 56 Question Id : 2021941406 Question Type : MCQ Option Shuffling : Yes Display Question Number : Yes Is
Question Mandatory : No Single Line Question Option : No Negative Marks Display Text : 1/3 Option Orientation : Vertical
Correct Marks : 1 Wrong Marks : 0.33

Who took the oath as the new Prime Minister of Papua New Guinea in May 2019?

Options :

1. ✗ Peter O'Neill
2. ✓ James Marape
3. ✗ Win Myint
4. ✗ Dan Rosensweig

Question Number : 57 Question Id : 2021941407 Question Type : MCQ Option Shuffling : Yes Display Question Number : Yes Is
Question Mandatory : No Single Line Question Option : No Negative Marks Display Text : 1/3 Option Orientation : Vertical
Correct Marks : 1 Wrong Marks : 0.33

Which Indian company announced the launch of an e-commerce app 'OrderMe' in May 2020?

Options :

1. ✗ ITC
2. ✗ Reliance

3. ✓ Patanjali

4. ✗ Tata

Question Number : 58 Question Id : 2021941408 Question Type : MCQ Option Shuffling : Yes Display Question Number : Yes Is Question Mandatory : No Single Line Question Option : No Negative Marks Display Text : 1/3 Option Orientation : Vertical Correct Marks : 1 Wrong Marks : 0.33

Which of the following human body organs behaves like the endocrine as well as exocrine glands?

Options :

1. ✗ Liver

2. ✗ Testis

3. ✓ Pancreas

4. ✗ Pituitary gland

Question Number : 59 Question Id : 2021941409 Question Type : MCQ Option Shuffling : Yes Display Question Number : Yes Is Question Mandatory : No Single Line Question Option : No Negative Marks Display Text : 1/3 Option Orientation : Vertical Correct Marks : 1 Wrong Marks : 0.33

What is the name of the smallest bone in human body?

Options :

1. ✗ Femur

2. ✓ Stapes

3. ✗ Fibula

4. ✗ Tibia

Question Number : 60 Question Id : 2021941410 Question Type : MCQ Option Shuffling : Yes Display Question Number : Yes Is Question Mandatory : No Single Line Question Option : No Negative Marks Display Text : 1/3 Option Orientation : Vertical Correct Marks : 1 Wrong Marks : 0.33

Who is first woman cosmonaut of the world?

Options :

1. ✗ Sally Ride

2. ✗ Svetlana Savitskaya

3. ✓ Valentina Tereshkova

4. ✗ Kalpana Chawla

Question Number : 61 Question Id : 2021941411 Question Type : MCQ Option Shuffling : Yes Display Question Number : Yes Is Question Mandatory : No Single Line Question Option : No Negative Marks Display Text : 1/3 Option Orientation : Vertical Correct Marks : 1 Wrong Marks : 0.33

What is the name of the first mapping satellite of India?



Options :

1. ✖ EDUSAT-V
2. ✔ CARTOSAT-I
3. ✖ ARYABHATTA
4. ✖ APOLLO-9

Question Number : 62 Question Id : 2021941412 Question Type : MCQ Option Shuffling : Yes Display Question Number : Yes Is Question Mandatory : No Single Line Question Option : No Negative Marks Display Text : 1/3 Option Orientation : Vertical Correct Marks : 1 Wrong Marks : 0.33

Name the non-metal which exists in liquid state at room temperature.

Options :

1. ✖ Mercury
2. ✖ Silicon
3. ✖ Lithium
4. ✔ Bromine

Question Number : 63 Question Id : 2021941413 Question Type : MCQ Option Shuffling : Yes Display Question Number : Yes Is Question Mandatory : No Single Line Question Option : No Negative Marks Display Text : 1/3 Option Orientation : Vertical Correct Marks : 1 Wrong Marks : 0.33

Which blood group is a universal recipient?

Options :

1. ✖ A
2. ✖ B
3. ✖ O
4. ✔ AB

Question Number : 64 Question Id : 2021941414 Question Type : MCQ Option Shuffling : Yes Display Question Number : Yes Is Question Mandatory : No Single Line Question Option : No Negative Marks Display Text : 1/3 Option Orientation : Vertical Correct Marks : 1 Wrong Marks : 0.33

Ringworm is an infection caused by:

Options :

1. ✖ bacteria
2. ✖ virus
3. ✔ fungi
4. ✖ protozoans



Question Number : 65 Question Id : 2021941415 Question Type : MCQ Option Shuffling : Yes Display Question Number : Yes Is Question Mandatory : No Single Line Question Option : No Negative Marks Display Text : 1/3 Option Orientation : Vertical Correct Marks : 1 Wrong Marks : 0.33

Which of the following is the full form of OTG?

Options :

1. ✖ On-Through-Go
2. ✔ On-The-Go
3. ✖ On-To-Go
4. ✖ On-They-Go

Question Number : 66 Question Id : 2021941416 Question Type : MCQ Option Shuffling : Yes Display Question Number : Yes Is Question Mandatory : No Single Line Question Option : No Negative Marks Display Text : 1/3 Option Orientation : Vertical Correct Marks : 1 Wrong Marks : 0.33

An ECG test is conducted:

Options :

1. ✖ to measure electrical signals of our brain.
2. ✖ to measure retina power by electrical impulse.
3. ✔ to measure electrical signals of our heart.
4. ✖ to measure muscle contraction.

Question Number : 67 Question Id : 2021941417 Question Type : MCQ Option Shuffling : Yes Display Question Number : Yes Is Question Mandatory : No Single Line Question Option : No Negative Marks Display Text : 1/3 Option Orientation : Vertical Correct Marks : 1 Wrong Marks : 0.33

Which of the following is a classical dance form of Andhra Pradesh?

Options :

1. ✖ Kathakali
2. ✖ Kathak
3. ✔ Kuchipudi
4. ✖ Bharatnatyam

Question Number : 68 Question Id : 2021941418 Question Type : MCQ Option Shuffling : Yes Display Question Number : Yes Is Question Mandatory : No Single Line Question Option : No Negative Marks Display Text : 1/3 Option Orientation : Vertical Correct Marks : 1 Wrong Marks : 0.33

According to the Indian State of Forest Report 2019, what is the total forest cover area of Andhra Pradesh?

Options :

1. ✔ 29,137.40 sq. km
2. ✖ 34,289.65 sq. km

- 3. ✖ 19,224.86 sq. km
- 4. ✖ 43,241.86 sq. km

Question Number : 69 Question Id : 2021941419 Question Type : MCQ Option Shuffling : Yes Display Question Number : Yes Is Question Mandatory : No Single Line Question Option : No Negative Marks Display Text : 1/3 Option Orientation : Vertical Correct Marks : 1 Wrong Marks : 0.33

The 'Bavikonda Buddhist Complex' is located in which of the following districts of Andhra Pradesh?

Options :

- 1. ✖ Srikakulam
- 2. ✖ Kurnool
- 3. ✔ Visakhapatnam
- 4. ✖ Nellore

Question Number : 70 Question Id : 2021941420 Question Type : MCQ Option Shuffling : Yes Display Question Number : Yes Is Question Mandatory : No Single Line Question Option : No Negative Marks Display Text : 1/3 Option Orientation : Vertical Correct Marks : 1 Wrong Marks : 0.33

Which Indian state DOES NOT share a boundary with Andhra Pradesh?

Options :

- 1. ✔ Kerala
- 2. ✖ Tamil Nadu
- 3. ✖ Karnataka
- 4. ✖ Odisha

Question Number : 71 Question Id : 2021941421 Question Type : MCQ Option Shuffling : Yes Display Question Number : Yes Is Question Mandatory : No Single Line Question Option : No Negative Marks Display Text : 1/3 Option Orientation : Vertical Correct Marks : 1 Wrong Marks : 0.33

How much was the palm oil production in Andhra Pradesh according to agriculture statistics 2017-18?

Options :

- 1. ✖ 12.34 lakh tonnes
- 2. ✔ 17.81 lakh tonnes
- 3. ✖ 21.43 lakh tonnes
- 4. ✖ 14.95 lakh tonnes

Question Number : 72 Question Id : 2021941422 Question Type : MCQ Option Shuffling : Yes Display Question Number : Yes Is Question Mandatory : No Single Line Question Option : No Negative Marks Display Text : 1/3 Option Orientation : Vertical Correct Marks : 1 Wrong Marks : 0.33



From where does Penna river originate?

Options :

1. ✘ Krishna river
2. ✘ Brahmagiri hills
3. ✔ Nandi hills
4. ✘ Bhadra river

Question Number : 73 Question Id : 2021941423 Question Type : MCQ Option Shuffling : Yes Display Question Number : Yes Is Question Mandatory : No Single Line Question Option : No Negative Marks Display Text : 1/3 Option Orientation : Vertical Correct Marks : 1 Wrong Marks : 0.33

Who headed the States Reorganisation Commission that was set up by the Government of India in December 1953?

Options :

1. ✘ C.M. Trivedi
2. ✘ K. Brahmananda Reddy
3. ✘ D. Sanjivaiah
4. ✔ Syed Fazl Ali

Question Number : 74 Question Id : 2021941424 Question Type : MCQ Option Shuffling : Yes Display Question Number : Yes Is Question Mandatory : No Single Line Question Option : No Negative Marks Display Text : 1/3 Option Orientation : Vertical Correct Marks : 1 Wrong Marks : 0.33

Which of the following was the capital of the Kakatiya dynasty?

Options :

1. ✘ Vijaynagar
2. ✘ Amaravati
3. ✔ Orugallu
4. ✘ Visakhapatnam

Question Number : 75 Question Id : 2021941425 Question Type : MCQ Option Shuffling : Yes Display Question Number : Yes Is Question Mandatory : No Single Line Question Option : No Negative Marks Display Text : 1/3 Option Orientation : Vertical Correct Marks : 1 Wrong Marks : 0.33

In which district of Andhra Pradesh is the Srisailem Dam located?

Options :

1. ✘ West Godavari
2. ✘ Guntur
3. ✔ Kurnool

4. ✖ Kadapa

Question Number : 76 Question Id : 2021941426 Question Type : MCQ Option Shuffling : Yes Display Question Number : Yes Is Question Mandatory : No Single Line Question Option : No Negative Marks Display Text : 1/3 Option Orientation : Vertical Correct Marks : 1 Wrong Marks : 0.33

Which district in Andhra Pradesh has the maximum number of mandals?

Options :

1. ✖ Anantpur

2. ✔ Chittoor

3. ✖ Kadapa

4. ✖ Guntur

Question Number : 77 Question Id : 2021941427 Question Type : MCQ Option Shuffling : Yes Display Question Number : Yes Is Question Mandatory : No Single Line Question Option : No Negative Marks Display Text : 1/3 Option Orientation : Vertical Correct Marks : 1 Wrong Marks : 0.33

Which of the following schemes is conducted by the government of Andhra Pradesh for the welfare of farmers initiated in October 2019?

Options :

1. ✖ Navratna scheme

2. ✔ Rythu Bharosa scheme

3. ✖ Kisan Samriddhi scheme

4. ✖ Kisan Mitra scheme

Question Number : 78 Question Id : 2021941428 Question Type : MCQ Option Shuffling : Yes Display Question Number : Yes Is Question Mandatory : No Single Line Question Option : No Negative Marks Display Text : 1/3 Option Orientation : Vertical Correct Marks : 1 Wrong Marks : 0.33

Which of the following articles is related to Panchayati Raj?

Options :

1. ✖ Article 147

2. ✖ Article 323

3. ✖ Article 329

4. ✔ Article 243

Question Number : 79 Question Id : 2021941429 Question Type : MCQ Option Shuffling : Yes Display Question Number : Yes Is Question Mandatory : No Single Line Question Option : No Negative Marks Display Text : 1/3 Option Orientation : Vertical Correct Marks : 1 Wrong Marks : 0.33

Who was the first Governor General of independent India?

Options :



1. ✓ Chakravarti Rajagopalachari
2. ✗ Lord Mountbatten
3. ✗ Charl's Elton
4. ✗ Charl's John Canning

Question Number : 80 Question Id : 2021941430 Question Type : MCQ Option Shuffling : Yes Display Question Number : Yes Is Question Mandatory : No Single Line Question Option : No Negative Marks Display Text : 1/3 Option Orientation : Vertical Correct Marks : 1 Wrong Marks : 0.33

The institution of Panchayati Raj was inaugurated by Pandit Jawaharlal Nehru on _____ in the Nagaur District of Rajasthan.

Options :

1. ✗ 14th July, 1961
2. ✗ 23rd April, 1965
3. ✓ 2nd October, 1959
4. ✗ 17th June, 1960

Question Number : 81 Question Id : 2021941431 Question Type : MCQ Option Shuffling : Yes Display Question Number : Yes Is Question Mandatory : No Single Line Question Option : No Negative Marks Display Text : 1/3 Option Orientation : Vertical Correct Marks : 1 Wrong Marks : 0.33

Which of the following Indian states was the first to adapt e-governance policy?

Options :

1. ✗ Manipur
2. ✗ Mizoram
3. ✗ Madhya Pradesh
4. ✓ Maharashtra

Question Number : 82 Question Id : 2021941432 Question Type : MCQ Option Shuffling : Yes Display Question Number : Yes Is Question Mandatory : No Single Line Question Option : No Negative Marks Display Text : 1/3 Option Orientation : Vertical Correct Marks : 1 Wrong Marks : 0.33

What is the female literacy rate of Andhra Pradesh, according to the census of 2011?

Options :

1. ✗ 67.02%
2. ✗ 64.29%
3. ✓ 59.15%
4. ✗ 74.88%

Question Number : 83 Question Id : 2021941433 Question Type : MCQ Option Shuffling : Yes Display Question Number : Yes Is Question Mandatory : No Single Line Question Option : No Negative Marks Display Text : 1/3 Option Orientation : Vertical Correct Marks : 1 Wrong Marks : 0.33

In which financial year Andhra Pradesh got first position for GSDP growth?

Options :

1. ✖ 2013-14
2. ✖ 2019-20
3. ✖ 2018-19
4. ✔ 2015-16

Question Number : 84 Question Id : 2021941434 Question Type : MCQ Option Shuffling : Yes Display Question Number : Yes Is Question Mandatory : No Single Line Question Option : No Negative Marks Display Text : 1/3 Option Orientation : Vertical Correct Marks : 1 Wrong Marks : 0.33

The Manuguru Heavy Water Plant in Andhra Pradesh was established in the year:

Options :

1. ✖ 2006
2. ✔ 1991
3. ✖ 2014
4. ✖ 1999

Question Number : 85 Question Id : 2021941435 Question Type : MCQ Option Shuffling : Yes Display Question Number : Yes Is Question Mandatory : No Single Line Question Option : No Negative Marks Display Text : 1/3 Option Orientation : Vertical Correct Marks : 1 Wrong Marks : 0.33

What was the rate of GDP growth for the financial year 1950-51 in India?

Options :

1. ✖ 4.2%
2. ✖ 6.2%
3. ✖ 4.9%
4. ✔ 3.6%

Question Number : 86 Question Id : 2021941436 Question Type : MCQ Option Shuffling : Yes Display Question Number : Yes Is Question Mandatory : No Single Line Question Option : No Negative Marks Display Text : 1/3 Option Orientation : Vertical Correct Marks : 1 Wrong Marks : 0.33

The first union budget of independent India was presented by _____.

Options :

1. ✖ T. Krishnan
2. ✖ C. Rajagopalachari

3. ✖ James Wilson
4. ✔ R.K. Shanmukham Chetty

Question Number : 87 Question Id : 2021941437 Question Type : MCQ Option Shuffling : Yes Display Question Number : Yes Is Question Mandatory : No Single Line Question Option : No Negative Marks Display Text : 1/3 Option Orientation : Vertical Correct Marks : 1 Wrong Marks : 0.33

Who founded the Andhra Bank?

Options :

1. ✖ K. Venkatappaiah
2. ✔ B.P. Sitaramayya
3. ✖ T. Prakasam
4. ✖ P. Sriramulu

Question Number : 88 Question Id : 2021941438 Question Type : MCQ Option Shuffling : Yes Display Question Number : Yes Is Question Mandatory : No Single Line Question Option : No Negative Marks Display Text : 1/3 Option Orientation : Vertical Correct Marks : 1 Wrong Marks : 0.33

Which city was the first capital of Andhra Pradesh?

Options :

1. ✖ Amravati
2. ✖ Hyderabad
3. ✔ Kurnool
4. ✖ Guntur

Question Number : 89 Question Id : 2021941439 Question Type : MCQ Option Shuffling : Yes Display Question Number : Yes Is Question Mandatory : No Single Line Question Option : No Negative Marks Display Text : 1/3 Option Orientation : Vertical Correct Marks : 1 Wrong Marks : 0.33

Andhra Pradesh Industrial Development Corporation Limited was established on _____.

Options :

1. ✖ 14th November, 1950
2. ✖ 25th May, 1973
3. ✖ 1st September, 1953
4. ✔ 16th December, 1960

Question Number : 90 Question Id : 2021941440 Question Type : MCQ Option Shuffling : Yes Display Question Number : Yes Is Question Mandatory : No Single Line Question Option : No Negative Marks Display Text : 1/3 Option Orientation : Vertical



Correct Marks : 1 Wrong Marks : 0.33

The total revenue receipt of Andhra Pradesh in Financial year 2018-19 was:

Options :

1. ✓ ₹ 1,57,599 crore
2. ✗ ₹ 2,23,081 crore
3. ✗ ₹ 2,31,485 crore
4. ✗ ₹ 1,48,378 crore

Question Number : 91 Question Id : 2021941441 Question Type : MCQ Option Shuffling : Yes Display Question Number : Yes Is Question Mandatory : No Single Line Question Option : No Negative Marks Display Text : 1/3 Option Orientation : Vertical

Correct Marks : 1 Wrong Marks : 0.33

The 'INDIRAMMA' scheme in Andhra Pradesh was initiated for:

Options :

1. ✓ improving the living standards of the people and housing
2. ✗ rehabilitation of old aged persons
3. ✗ agricultural welfare
4. ✗ education for ST/SC

Question Number : 92 Question Id : 2021941442 Question Type : MCQ Option Shuffling : Yes Display Question Number : Yes Is Question Mandatory : No Single Line Question Option : No Negative Marks Display Text : 1/3 Option Orientation : Vertical

Correct Marks : 1 Wrong Marks : 0.33

The 'Indira Sagar' project is located on the river Godavari near Ramayyapet village of _____ Mandal of West Godavari district in Andhra Pradesh.

Options :

1. ✗ Rudravaram
2. ✓ Polavaram
3. ✗ Mandapeta
4. ✗ Jaggampeta

Question Number : 93 Question Id : 2021941443 Question Type : MCQ Option Shuffling : Yes Display Question Number : Yes Is Question Mandatory : No Single Line Question Option : No Negative Marks Display Text : 1/3 Option Orientation : Vertical

Correct Marks : 1 Wrong Marks : 0.33

What is the coastline length of Andhra Pradesh?

Options :

1. ✗ 637 Km
2. ✓ 974 Km
3. ✗ 385 Km



4. ✖ 684 Km

Question Number : 94 Question Id : 2021941444 Question Type : MCQ Option Shuffling : Yes Display Question Number : Yes Is Question Mandatory : No Single Line Question Option : No Negative Marks Display Text : 1/3 Option Orientation : Vertical Correct Marks : 1 Wrong Marks : 0.33

The longitudinal extent of Andhra Pradesh is:

Options :

1. ✖ 12 ° 41'N to 22 ° 57'N

2. ✖ 43 ° 81'W to 58 ° 5'W

3. ✔ 76 ° 47'E to 84 ° 50'E

4. ✖ 62 ° 72'S to 74 ° 35'S

Question Number : 95 Question Id : 2021941445 Question Type : MCQ Option Shuffling : Yes Display Question Number : Yes Is Question Mandatory : No Single Line Question Option : No Negative Marks Display Text : 1/3 Option Orientation : Vertical Correct Marks : 1 Wrong Marks : 0.33

Andhra Pradesh shares its boundary with _____ in the north-east.

Options :

1. ✖ West Bengal

2. ✔ Odisha

3. ✖ Chhattisgarh

4. ✖ Tamil Nadu

Question Number : 96 Question Id : 2021941446 Question Type : MCQ Option Shuffling : Yes Display Question Number : Yes Is Question Mandatory : No Single Line Question Option : No Negative Marks Display Text : 1/3 Option Orientation : Vertical Correct Marks : 1 Wrong Marks : 0.33

Which of the following is a landlocked district of Andhra Pradesh?

Options :

1. ✖ Srikakulam

2. ✖ Guntur

3. ✖ Nellore

4. ✔ Kurnool

Question Number : 97 Question Id : 2021941447 Question Type : MCQ Option Shuffling : Yes Display Question Number : Yes Is Question Mandatory : No Single Line Question Option : No Negative Marks Display Text : 1/3 Option Orientation : Vertical Correct Marks : 1 Wrong Marks : 0.33

The smallest district (according to area) of Andhra Pradesh is _____.

Options :

1. ✖ Chittoor
2. ✔ Srikakulam
3. ✖ Nellore
4. ✖ Kurnool

Question Number : 98 Question Id : 2021941448 Question Type : MCQ Option Shuffling : Yes Display Question Number : Yes Is Question Mandatory : No Single Line Question Option : No Negative Marks Display Text : 1/3 Option Orientation : Vertical Correct Marks : 1 Wrong Marks : 0.33

Which district of Andhra Pradesh holds first position in the extraction of mica?

Options :

1. ✖ Kurnool
2. ✖ Kadapa
3. ✔ Nellore
4. ✖ East Godavari

Question Number : 99 Question Id : 2021941449 Question Type : MCQ Option Shuffling : Yes Display Question Number : Yes Is Question Mandatory : No Single Line Question Option : No Negative Marks Display Text : 1/3 Option Orientation : Vertical Correct Marks : 1 Wrong Marks : 0.33

West Godavari in Andhra Pradesh, is the leading district for the production of:

Options :

1. ✖ copper
2. ✖ graphite
3. ✖ gold
4. ✔ coal

Question Number : 100 Question Id : 2021941450 Question Type : MCQ Option Shuffling : Yes Display Question Number : Yes Is Question Mandatory : No Single Line Question Option : No Negative Marks Display Text : 1/3 Option Orientation : Vertical Correct Marks : 1 Wrong Marks : 0.33

Sri. Venkateswara National Park is famous for the protection of the:

Options :

1. ✖ golden gecko
2. ✖ bullfrog
3. ✔ spotted deer
4. ✖ black napped hare



Question Number : 101 Question Id : 2021941451 Question Type : MCQ Option Shuffling : Yes Display Question Number : Yes Is Question Mandatory : No Single Line Question Option : No Negative Marks Display Text : 1/3 Option Orientation : Vertical Correct Marks : 1 Wrong Marks : 0.33

Which of the following is an elephant reserve in Andhra Pradesh?

Options :

1. ✖ Coringa Wildlife Sanctuary
2. ✖ Papikonda National Park
3. ✖ Nelapattu Sanctuary
4. ✔ Koundinya Wildlife Sanctuary

Question Number : 102 Question Id : 2021941452 Question Type : MCQ Option Shuffling : Yes Display Question Number : Yes Is Question Mandatory : No Single Line Question Option : No Negative Marks Display Text : 1/3 Option Orientation : Vertical Correct Marks : 1 Wrong Marks : 0.33

Somasila Dam is constructed across river _____ .

Options :

1. ✖ Krishna
2. ✖ Nagavali
3. ✔ Pennar
4. ✖ Godavari

Question Number : 103 Question Id : 2021941453 Question Type : MCQ Option Shuffling : Yes Display Question Number : Yes Is Question Mandatory : No Single Line Question Option : No Negative Marks Display Text : 1/3 Option Orientation : Vertical Correct Marks : 1 Wrong Marks : 0.33

_____ is a proposed Atomic Power Project in Srikakulam district Andhra Pradesh aimed to generate about 6600 mW energy.

Options :

1. ✖ Sree Rayalaseema
2. ✔ Kovvada Power Ltd.
3. ✖ Chinnapavani Power Ltd.
4. ✖ Sembcorp Gayatri

Question Number : 104 Question Id : 2021941454 Question Type : MCQ Option Shuffling : Yes Display Question Number : Yes Is Question Mandatory : No Single Line Question Option : No Negative Marks Display Text : 1/3 Option Orientation : Vertical Correct Marks : 1 Wrong Marks : 0.33

The bifurcation of Andhra Pradesh received the President's assent on:

Options :

1. ✖ 9th November, 2014

2. ✖ 3rd February, 2014
3. ✔ 1st March, 2014
4. ✖ 25th November, 2014

Question Number : 105 Question Id : 2021941455 Question Type : MCQ Option Shuffling : Yes Display Question Number : Yes Is Question Mandatory : No Single Line Question Option : No Negative Marks Display Text : 1/3 Option Orientation : Vertical Correct Marks : 1 Wrong Marks : 0.33

The full form of APCRDA is:

Options :

1. ✖ Andhra Pradesh Control Research and Development Authority
2. ✔ Andhra Pradesh Capital Region Development Authority
3. ✖ Andhra Pradesh Centralised Research and Development Authority
4. ✖ Andhra Pradesh Control Rehabilitation and Development Authority

Question Number : 106 Question Id : 2021941456 Question Type : MCQ Option Shuffling : Yes Display Question Number : Yes Is Question Mandatory : No Single Line Question Option : No Negative Marks Display Text : 1/3 Option Orientation : Vertical Correct Marks : 1 Wrong Marks : 0.33

According to the Census 2011, the child sex ratio of Andhra Pradesh is:

Options :

1. ✔ 939
2. ✖ 993
3. ✖ 961
4. ✖ 978

Question Number : 107 Question Id : 2021941457 Question Type : MCQ Option Shuffling : Yes Display Question Number : Yes Is Question Mandatory : No Single Line Question Option : No Negative Marks Display Text : 1/3 Option Orientation : Vertical Correct Marks : 1 Wrong Marks : 0.33

What is the share percentage divided between Singareni Collieries Company Ltd.(SCCL) owned by the Government of Telangana and Government of India, respectively?

Options :

1. ✖ 30% and 70%
2. ✖ 45% and 55%
3. ✖ 70% and 30%
4. ✔ 51% and 49%

Question Number : 108 Question Id : 2021941458 Question Type : MCQ Option Shuffling : Yes Display Question Number : Yes Is Question Mandatory : No Single Line Question Option : No Negative Marks Display Text : 1/3 Option Orientation : Vertical Correct Marks : 1 Wrong Marks : 0.33

When did Andhra Pradesh and Telangana get separated into two states?

Options :

1. ✖ 31st March, 2015
2. ✖ 6th July, 2014
3. ✖ 19th Nov, 2015
4. ✔ 2nd June, 2014

Question Number : 109 Question Id : 2021941459 Question Type : MCQ Option Shuffling : Yes Display Question Number : Yes Is Question Mandatory : No Single Line Question Option : No Negative Marks Display Text : 1/3 Option Orientation : Vertical Correct Marks : 1 Wrong Marks : 0.33

There are _____ revenue divisions in Telangana.

Options :

1. ✖ 13
2. ✖ 128
3. ✔ 73
4. ✖ 33

Question Number : 110 Question Id : 2021941460 Question Type : MCQ Option Shuffling : Yes Display Question Number : Yes Is Question Mandatory : No Single Line Question Option : No Negative Marks Display Text : 1/3 Option Orientation : Vertical Correct Marks : 1 Wrong Marks : 0.33

There are _____ schedules in the Andhra Pradesh Reorganisation Act, 2014.

Options :

1. ✖ 25
2. ✖ 17
3. ✖ 28
4. ✔ 13

Question Number : 111 Question Id : 2021941461 Question Type : MCQ Option Shuffling : Yes Display Question Number : Yes Is Question Mandatory : No Single Line Question Option : No Negative Marks Display Text : 1/3 Option Orientation : Vertical Correct Marks : 1 Wrong Marks : 0.33

12 years ago, age of Ramesh was $\frac{2}{3}$ of his present age. What is his present age?

Options :

1. ✖ 20

2. ✖ 28

3. ✔ 36

4. ✖ 45

Question Number : 112 Question Id : 2021941462 Question Type : MCQ Option Shuffling : Yes Display Question Number : Yes Is Question Mandatory : No Single Line Question Option : No Negative Marks Display Text : 1/3 Option Orientation : Vertical Correct Marks : 1 Wrong Marks : 0.33

If today is Friday, then which day will be after 72 days?

Options :

1. ✔ Sunday

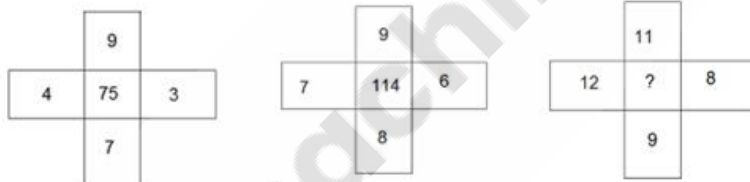
2. ✖ Monday

3. ✖ Tuesday

4. ✖ Wednesday

Question Number : 113 Question Id : 2021941463 Question Type : MCQ Option Shuffling : Yes Display Question Number : Yes Is Question Mandatory : No Single Line Question Option : No Negative Marks Display Text : 1/3 Option Orientation : Vertical Correct Marks : 1 Wrong Marks : 0.33

Study the given pattern carefully and select the number that can replace the question mark (?) in it.



Options :

1. ✔ 195

2. ✖ 196

3. ✖ 204

4. ✖ 210

Question Number : 114 Question Id : 2021941464 Question Type : MCQ Option Shuffling : Yes Display Question Number : Yes Is Question Mandatory : No Single Line Question Option : No Negative Marks Display Text : 1/3 Option Orientation : Vertical Correct Marks : 1 Wrong Marks : 0.33

If length of a rectangular field is increased by 20% and its breadth is decreased by 5%, then by what percent its area will be changed?

Options :

1. ✖ 5%

2. ✖ 8%

3. ✖ 12%



4. ✓ 14%

Question Number : 115 Question Id : 2021941465 Question Type : MCQ Option Shuffling : Yes Display Question Number : Yes Is Question Mandatory : No Single Line Question Option : No Negative Marks Display Text : 1/3 Option Orientation : Vertical Correct Marks : 1 Wrong Marks : 0.33

If in an imaginary mathematical system, symbol '-' stands for '+', symbol '+' stands for '-', symbol '×' stands for '-' and symbol '+' stands for '×', and the rest of the things are the same as the existing mathematical system, then find the value of the following equation.

$$56 - 8 \div 6 \times 3 + 4 = ?$$

Options :

1. ✗ 48

2. ✗ 19

3. ✗ 8

4. ✓ 1

Question Number : 116 Question Id : 2021941466 Question Type : MCQ Option Shuffling : Yes Display Question Number : Yes Is Question Mandatory : No Single Line Question Option : No Negative Marks Display Text : 1/3 Option Orientation : Vertical Correct Marks : 1 Wrong Marks : 0.33

Select the letter-cluster that can replace the question mark (?) in the following series.

LUE, NQG, PMI, RIK, ?

Options :

1. ✗ TKM

2. ✓ TEM

3. ✗ VMO

4. ✗ VEM

Question Number : 117 Question Id : 2021941467 Question Type : MCQ Option Shuffling : Yes Display Question Number : Yes Is Question Mandatory : No Single Line Question Option : No Negative Marks Display Text : 1/3 Option Orientation : Vertical Correct Marks : 1 Wrong Marks : 0.33

Select the number that can replace the question mark (?) in the following series.

5, 17, 53, 161, ?

Options :

1. ✗ 197

2. ✗ 269

3. ✗ 324

4. ✓ 485

Question Number : 118 Question Id : 2021941468 Question Type : MCQ Option Shuffling : Yes Display Question Number : Yes Is Question Mandatory : No Single Line Question Option : No Negative Marks Display Text : 1/3 Option Orientation : Vertical Correct Marks : 1 Wrong Marks : 0.33

Four words have been given, out of which three are alike in some manner and one is different.

Select the odd one.

Options :

1. ✖ Windows
2. ✖ Linux
3. ✖ macOS
4. ✔ Python

Question Number : 119 Question Id : 2021941469 Question Type : MCQ Option Shuffling : Yes Display Question Number : Yes Is Question Mandatory : No Single Line Question Option : No Negative Marks Display Text : 1/3 Option Orientation : Vertical Correct Marks : 1 Wrong Marks : 0.33

Select the odd number out from the given options.

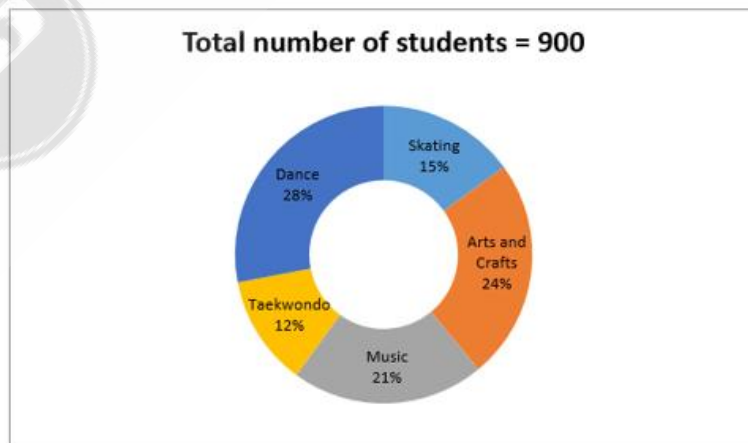
Options :

1. ✖ 13
2. ✖ 17
3. ✔ 21
4. ✖ 29

Question Number : 120 Question Id : 2021941470 Question Type : MCQ Option Shuffling : Yes Display Question Number : Yes Is Question Mandatory : No Single Line Question Option : No Negative Marks Display Text : 1/3 Option Orientation : Vertical Correct Marks : 1 Wrong Marks : 0.33

Study the given chart carefully and answer the following questions on its basis.

The chart given below shows the percentage of students of a school in different extra-curricular clubs.



If the number of boys in the Taekwondo club is 36, then what is the ratio of girls and boys in the Taekwondo club?

Options :

1. ✖ 1 : 2

2. ✓ 2 : 1

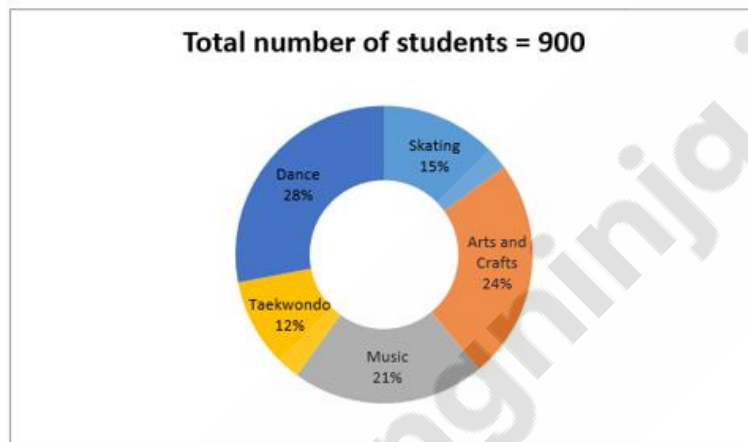
3. ✗ 1 : 3

4. ✗ 2 : 3

Question Number : 121 Question Id : 2021941471 Question Type : MCQ Option Shuffling : Yes Display Question Number : Yes Is Question Mandatory : No Single Line Question Option : No Negative Marks Display Text : 1/3 Option Orientation : Vertical Correct Marks : 1 Wrong Marks : 0.33

Study the given chart carefully and answer the following questions on its basis.

The chart given below shows the percentage of students of a school in different extra-curricular clubs.



If 5% of the total number of Dance and Taekwondo club students migrated to the Arts and Crafts club, then what will be the new number of students in the Arts and Crafts club?

Options :

1. ✗ 219

2. ✗ 226

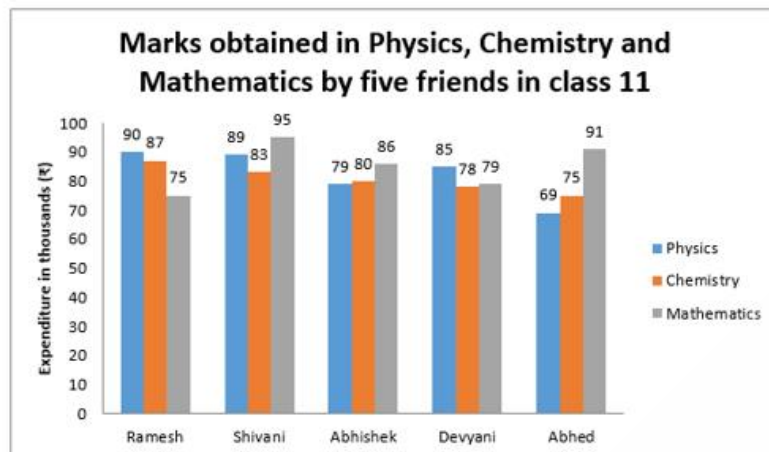
3. ✓ 234

4. ✗ 236

Question Number : 122 Question Id : 2021941472 Question Type : MCQ Option Shuffling : Yes Display Question Number : Yes Is Question Mandatory : No Single Line Question Option : No Negative Marks Display Text : 1/3 Option Orientation : Vertical Correct Marks : 1 Wrong Marks : 0.33

Study the given graph carefully and answer the following questions on its basis.

The graph shows the marks obtained by five friends in three subjects.



What is the ratio of total marks obtained in physics and total marks obtained in chemistry by all the five friends?

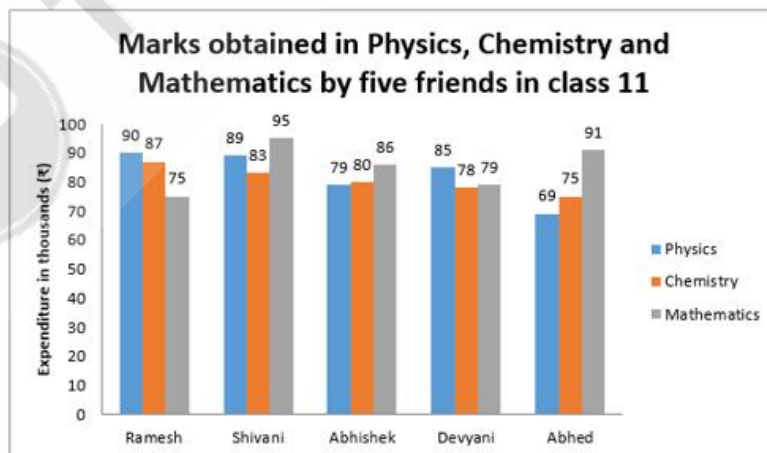
Options :

1. ✗ 1 : 1
2. ✓ 412 : 403
3. ✗ 417 : 407
4. ✗ 403 : 412

Question Number : 123 Question Id : 2021941473 Question Type : MCQ Option Shuffling : Yes Display Question Number : Yes Is Question Mandatory : No Single Line Question Option : No Negative Marks Display Text : 1/3 Option Orientation : Vertical Correct Marks : 1 Wrong Marks : 0.33

Study the given graph carefully and answer the following questions on its basis.

The graph shows the marks obtained by five friends in three subjects.



By what percent total marks obtained by Ramesh, Abhishek and Abhed in chemistry is greater than the total marks obtained by Shivani and Devyani in chemistry?

Options :

1. ✗ 33.47%

2. ✓ 50.31%

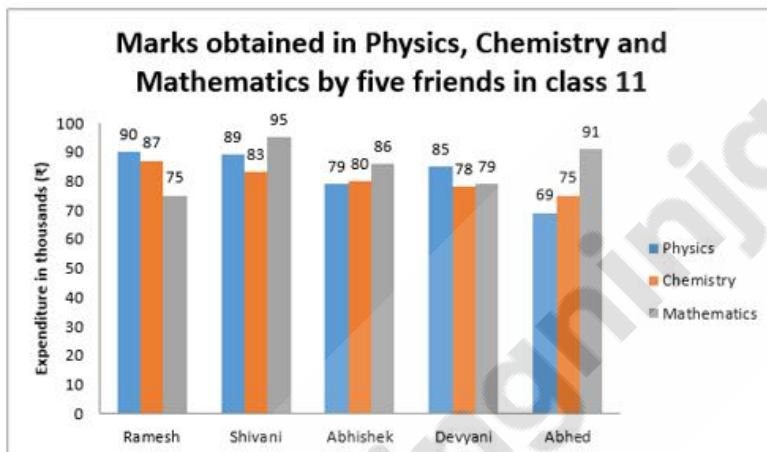
3. ✗ 60.42%

4. ✗ 62.52%

Question Number : 124 Question Id : 2021941474 Question Type : MCQ Option Shuffling : Yes Display Question Number : Yes Is Question Mandatory : No Single Line Question Option : No Negative Marks Display Text : 1/3 Option Orientation : Vertical Correct Marks : 1 Wrong Marks : 0.33

Study the given graph carefully and answer the following questions on its basis.

The graph shows the marks obtained by five friends in three subjects.



On the basis of total marks obtained in physics, chemistry and mathematics together, who is on the third position?

Options :

1. ✗ Abhed

2. ✗ Devyani

3. ✓ Abhishek

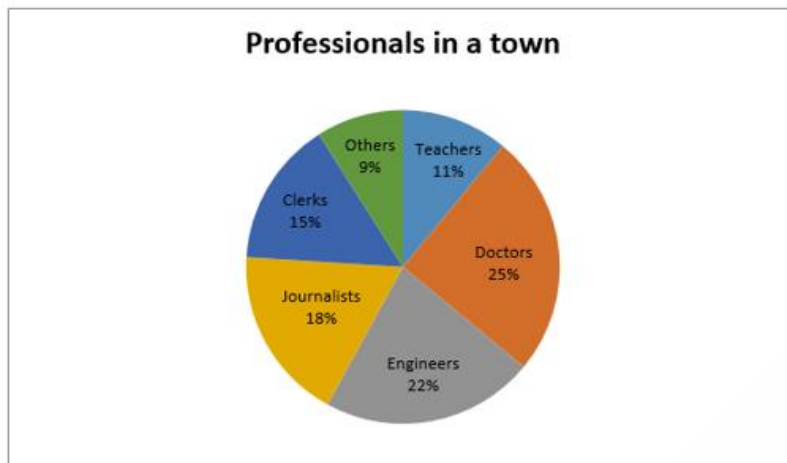
4. ✗ Ramesh

Question Number : 125 Question Id : 2021941475 Question Type : MCQ Option Shuffling : Yes Display Question Number : Yes Is Question Mandatory : No Single Line Question Option : No Negative Marks Display Text : 1/3 Option Orientation : Vertical Correct Marks : 1 Wrong Marks : 0.33



Study the following Pie-chart carefully and answer the given questions.

The Pie-chart given here represents the percentage of professionals in different professions in a town.



What is the central angle corresponding to journalists and engineers together?

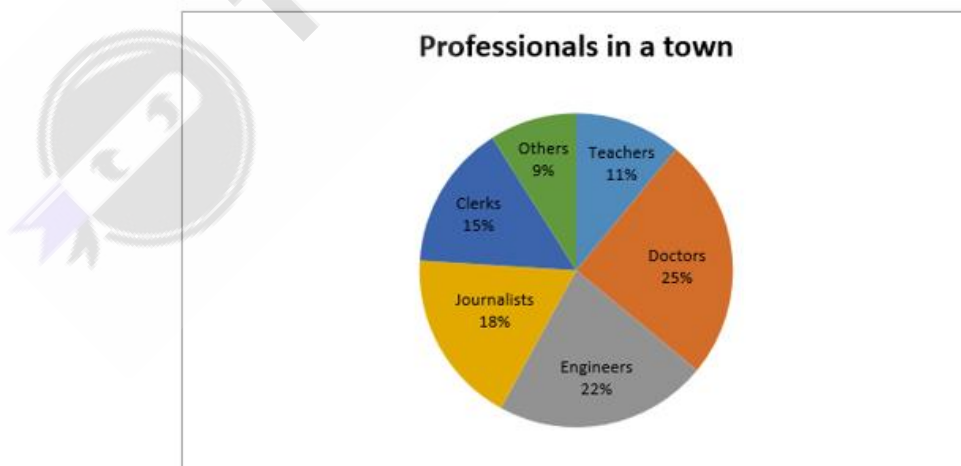
Options :

1. ✖ 135°
2. ✖ 140°
3. ✔ 144°
4. ✖ 148°

Question Number : 126 Question Id : 2021941476 Question Type : MCQ Option Shuffling : Yes Display Question Number : Yes Is Question Mandatory : No Single Line Question Option : No Negative Marks Display Text : 1/3 Option Orientation : Vertical Correct Marks : 1 Wrong Marks : 0.33

Study the following Pie-chart carefully and answer the given questions.

The Pie-chart given here represents the percentage of professionals in different professions in a town.



If the number of doctors is 3000 greater than the number of clerks in the town, then what is the total number of professionals in the town?

Options :

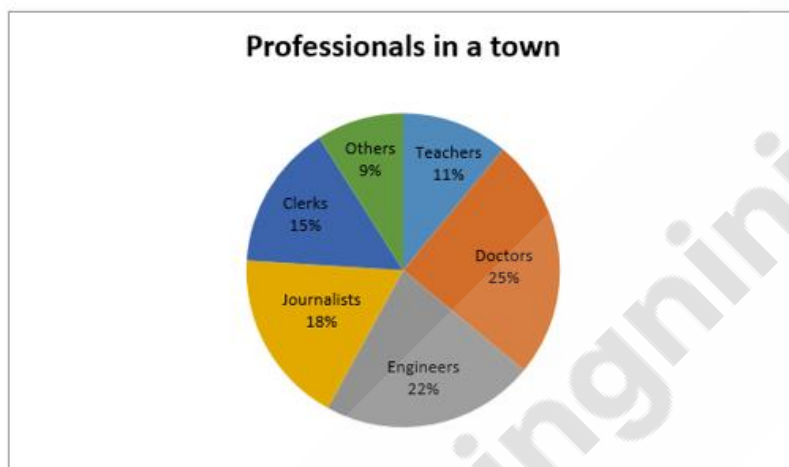
1. ✖ 75,000

2. ✖ 66,000
3. ✖ 33,000
4. ✔ 30,000

Question Number : 127 Question Id : 2021941477 Question Type : MCQ Option Shuffling : Yes Display Question Number : Yes Is Question Mandatory : No Single Line Question Option : No Negative Marks Display Text : 1/3 Option Orientation : Vertical Correct Marks : 1 Wrong Marks : 0.33

Study the following Pie-chart carefully and answer the given questions.

The Pie-chart given here represents the percentage of professionals in different professions in a town.



If 46% of teachers are male, then what is the number of female teachers in the town?

Options :

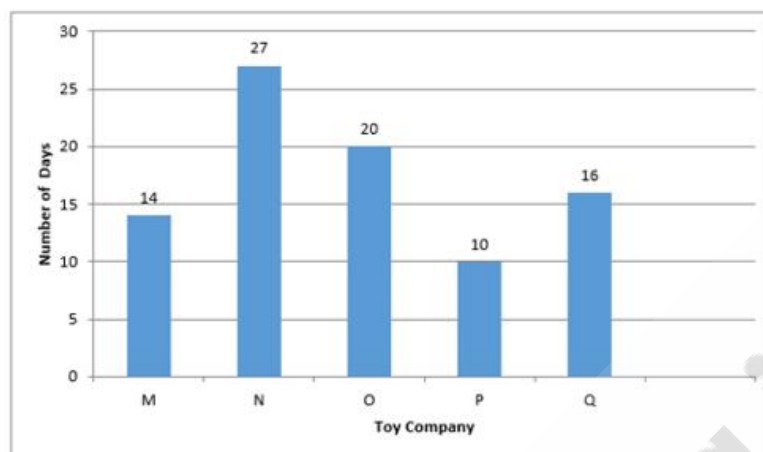
1. ✖ 2250
2. ✔ 1782
3. ✖ 1658
4. ✖ 1498

Question Number : 128 Question Id : 2021941478 Question Type : MCQ Option Shuffling : Yes Display Question Number : Yes Is Question Mandatory : No Single Line Question Option : No Negative Marks Display Text : 1/3 Option Orientation : Vertical Correct Marks : 1 Wrong Marks : 0.33



Study the following graph carefully and answer the given questions.

The bar graph shows the number of days taken by five different toy companies in manufacturing 5000 units of toys individually.



What is the difference in number of toys manufactured by company P and Q in 32 days?

Options :

1. ✖ 4000
2. ✔ 6000
3. ✖ 8000
4. ✖ 10000

Question Number : 129 Question Id : 2021941479 Question Type : MCQ Option Shuffling : Yes Display Question Number : Yes Is Question Mandatory : No Single Line Question Option : No Negative Marks Display Text : 1/3 Option Orientation : Vertical Correct Marks : 1 Wrong Marks : 0.33

Study the following table to answer the given questions.

The given table shows expenditure of a school management on different heads in different years.

(As percent of total expenditure)

Heads	2016-17	2017-18	2018-19	2019-20
Salary of teaching staff	26.60	27.58	28.80	27.10
Salary of non-teaching staff	19.30	17.60	22.00	23.40
Repair and maintenance of infrastructure	29.70	28.67	27.50	28.95
Consumables	9.80	8.80	11.60	12.60
Miscellaneous	14.60	17.35	10.10	7.95
Total expenditure	100.00	100.00	100.00	100.00

In which year the percentage expenditure on Repair and Maintenance and Miscellaneous is greater than the percentage expenditure on salary of teaching and non-teaching staff?

Options :

1. ✖ 2016-17
2. ✔ 2017-18

3. ✖ 2018-19

4. ✖ 2019-20

Question Number : 130 Question Id : 2021941480 Question Type : MCQ Option Shuffling : Yes Display Question Number : Yes Is Question Mandatory : No Single Line Question Option : No Negative Marks Display Text : 1/3 Option Orientation : Vertical Correct Marks : 1 Wrong Marks : 0.33

Study the following table to answer the given questions.

The given table shows expenditure of a school management on different heads in different years.

(As percent of total expenditure)

Heads	2016-17	2017-18	2018-19	2019-20
Salary of teaching staff	26.60	27.58	28.80	27.10
Salary of non-teaching staff	19.30	17.60	22.00	23.40
Repair and maintenance of infrastructure	29.70	28.67	27.50	28.95
Consumables	9.80	8.80	11.60	12.60
Miscellaneous	14.60	17.35	10.10	7.95
Total expenditure	100.00	100.00	100.00	100.00

In which year, the expenditure on salary of teaching staff has increased at the highest rate?

Options :

1. ✖ 2016-17

2. ✖ 2017-18

3. ✔ 2018-19

4. ✖ 2019-20

Question Number : 131 Question Id : 2021941481 Question Type : MCQ Option Shuffling : Yes Display Question Number : Yes Is Question Mandatory : No Single Line Question Option : No Negative Marks Display Text : 1/3 Option Orientation : Vertical Correct Marks : 1 Wrong Marks : 0.33

Study the following table to answer the given questions:

The given table shows expenditure of a school management on different heads in different years.

(As percent of total expenditure)

Heads	2016-17	2017-18	2018-19	2019-20
Salary of teaching staff	26.60	27.58	28.80	27.10
Salary of non-teaching staff	19.30	17.60	22.00	23.40
Repair and maintenance of infrastructure	29.70	28.67	27.50	28.95
Consumables	9.80	8.80	11.60	12.60
Miscellaneous	14.60	17.35	10.10	7.95
Total expenditure	100.00	100.00	100.00	100.00

In which year is the ratio of percentage expenditure on salary of teaching staff to the salary of non-teaching staff, the highest?

Options :



1. ✖ 2016-17
2. ✔ 2017-18
3. ✖ 2018-19
4. ✖ 2019-20

Question Number : 132 Question Id : 2021941482 Question Type : MCQ Option Shuffling : Yes Display Question Number : Yes Is Question Mandatory : No Single Line Question Option : No Negative Marks Display Text : 1/3 Option Orientation : Vertical Correct Marks : 1 Wrong Marks : 0.33

Study the table carefully and answer the following questions on this basis.

The given table shows the marks obtained in class 10 by top five students of a school.

Subject Students	Hindi	English	Mathematics	Science	Soc. Science
Arun	84	98	85	95	93
Gita	89	90	95	80	90
Sonam	90	92	100	89	95
Ajay	95	80	92	98	91
Reshma	91	89	94	99	92

Who has topped the school in class 10?

Options :

1. ✖ Arun
2. ✔ Sonam
3. ✖ Ajay
4. ✖ Reshma

Question Number : 133 Question Id : 2021941483 Question Type : MCQ Option Shuffling : Yes Display Question Number : Yes Is Question Mandatory : No Single Line Question Option : No Negative Marks Display Text : 1/3 Option Orientation : Vertical Correct Marks : 1 Wrong Marks : 0.33



Study the table carefully and answer the following questions on this basis.

The given table shows the marks obtained in class 10 by top five students of a school.

Subject Students	Hindi	English	Mathematics	Science	Soc. Science
Arun	84	98	85	95	93
Gita	89	90	95	80	90
Sonam	90	92	100	89	95
Ajay	95	80	92	98	91
Reshma	91	89	94	99	92

The total marks of the first ranker are by what percent higher than the total marks of the fifth ranker of the school in class 10?

Options :

1. ✖ 4.40%

2. ✔ 4.95%

3. ✖ 5.20%

4. ✖ 5.40%

Question Number : 134 Question Id : 2021941484 Question Type : MCQ Option Shuffling : Yes Display Question Number : Yes Is Question Mandatory : No Single Line Question Option : No Negative Marks Display Text : 1/3 Option Orientation : Vertical Correct Marks : 1 Wrong Marks : 0.33

Study the given graph carefully and answer the given questions.

The graph shows the profit earned by a company over different years.

[Percent Profit = (Income – Expenditure) × 100/Expenditure]



If the expenditure of the company in the year 2015 was ₹ 60,000, then what was the income of the company in that year?

Options :

1. ✖ ₹ 60,000

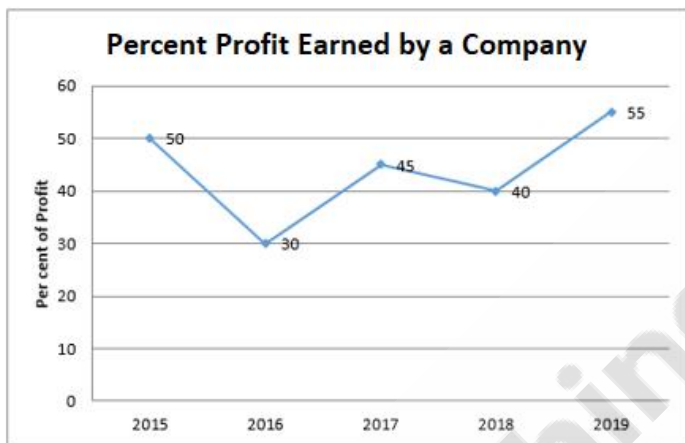
2. ✖ ₹ 80,000
3. ✔ ₹ 90,000
4. ✖ ₹ 1,00,000

Question Number : 135 Question Id : 2021941485 Question Type : MCQ Option Shuffling : Yes Display Question Number : Yes Is Question Mandatory : No Single Line Question Option : No Negative Marks Display Text : 1/3 Option Orientation : Vertical Correct Marks : 1 Wrong Marks : 0.33

Study the given graph carefully and answer the given questions.

The graph shows the profit earned by a company over different years.

[Percent Profit = (Income – Expenditure) × 100/Expenditure]



What is the average percent profit earned by the company over the years?

Options :

1. ✖ 39%
2. ✔ 44%
3. ✖ 47%
4. ✖ 51%

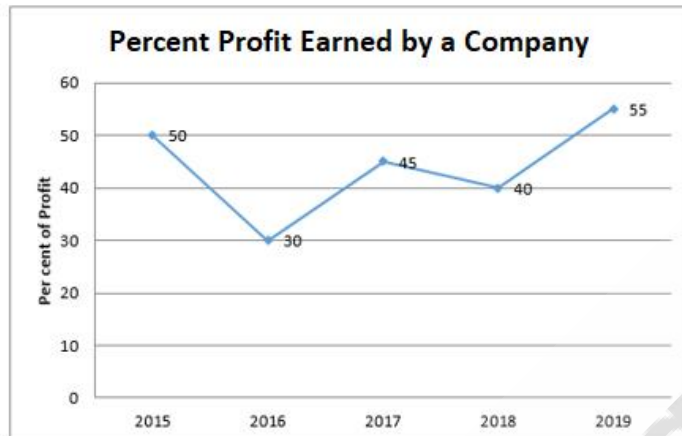
Question Number : 136 Question Id : 2021941486 Question Type : MCQ Option Shuffling : Yes Display Question Number : Yes Is Question Mandatory : No Single Line Question Option : No Negative Marks Display Text : 1/3 Option Orientation : Vertical Correct Marks : 1 Wrong Marks : 0.33



Study the given graph carefully and answer the given questions.

The graph shows the profit earned by a company over different years.

[Percent Profit = (Income – Expenditure) × 100/Expenditure]



If the income of the company in the years 2016 and 2018 was ₹ 91,000 and ₹ 1,12,000 respectively, then the difference in expenditures of the company in the year 2016 and 2018 was:

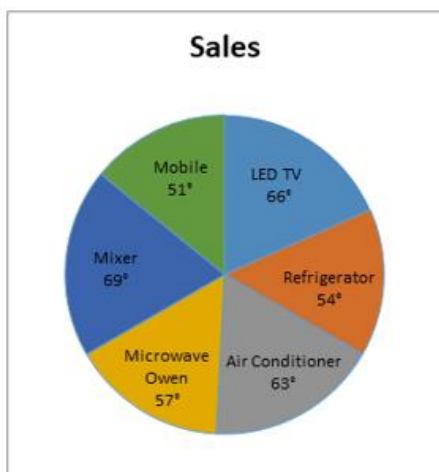
Options :

1. ✓ ₹ 10,000
2. ✗ ₹ 20,000
3. ✗ ₹ 25,000
4. ✗ ₹ 30,000

Question Number : 137 Question Id : 2021941487 Question Type : MCQ Option Shuffling : Yes Display Question Number : Yes Is Question Mandatory : No Single Line Question Option : No Negative Marks Display Text : 1/3 Option Orientation : Vertical Correct Marks : 1 Wrong Marks : 0.33

Study the following Pie-chart carefully and answer the given questions.

The Pie-chart represents the number of different electronic gadgets sold by a shop in one month. The total number of electronic gadgets sold by that shop in one month is 960.



What is the total number of mixers, refrigerators and air conditioners sold in that month?



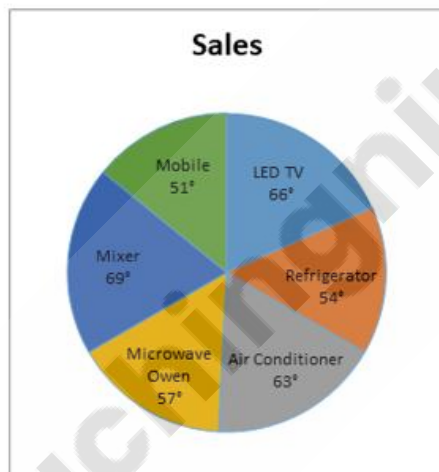
Options :

1. ✖ 389
2. ✖ 445
3. ✔ 496
4. ✖ 525

Question Number : 138 Question Id : 2021941488 Question Type : MCQ Option Shuffling : Yes Display Question Number : Yes Is Question Mandatory : No Single Line Question Option : No Negative Marks Display Text : 1/3 Option Orientation : Vertical Correct Marks : 1 Wrong Marks : 0.33

Study the following Pie-chart carefully and answer the given questions.

The Pie-chart represents the number of different electronic gadgets sold by a shop in one month. The total number of electronic gadgets sold by that shop in one month is 960.



The difference in number of units of electronic gadgets which was sold maximum and which was sold minimum is:

Options :

1. ✖ 65
2. ✖ 58
3. ✔ 48
4. ✖ 38

Question Number : 139 Question Id : 2021941489 Question Type : MCQ Option Shuffling : Yes Display Question Number : Yes Is Question Mandatory : No Single Line Question Option : No Negative Marks Display Text : 1/3 Option Orientation : Vertical Correct Marks : 1 Wrong Marks : 0.33

Study the following pie-charts carefully and answer the given questions.

The first Pi chart shows the weights of different grocery items sold per day in terms of percentage of total items sold per day. The second Pi chart shows the cost of different grocery items sold per day in terms of percentage of total cost of grocery items sold per day.

At this grocery shop 250 kg of different types of grocery items are sold per day, which is equivalent to ₹ 18,500.

Chart 1



Chart 2



If Gargi purchases 5 kg of wheat, 2 kg of rice and 250 g of spices from this shop, then how much amount she has to pay to the shopkeeper?

Options :

1. ✗ ₹ 360.50
2. ✓ ₹ 393.05
3. ✗ ₹ 410.25
4. ✗ ₹ 413.50

Question Number : 140 Question Id : 2021941490 Question Type : MCQ Option Shuffling : Yes Display Question Number : Yes Is Question Mandatory : No Single Line Question Option : No Negative Marks Display Text : 1/3 Option Orientation : Vertical Correct Marks : 1 Wrong Marks : 0.33

If the mean of the following data is 9, then what is the value of 'Q'?

11, 1, 9, 4, Q, 2, 1, 8, 9, 11, 17, 18, 7

Options :

1. ✗ 9
2. ✗ 11
3. ✗ 17
4. ✓ 19

Question Number : 141 Question Id : 2021941491 Question Type : MCQ Option Shuffling : Yes Display Question Number : Yes Is Question Mandatory : No Single Line Question Option : No Negative Marks Display Text : 1/3 Option Orientation : Vertical Correct Marks : 1 Wrong Marks : 0.33

If the variance of a set of data is 361, then what is the standard deviation of the data?

Options :

- 1. ✖ 14
- 2. ✖ 16
- 3. ✔ 19
- 4. ✖ 23

Question Number : 142 Question Id : 2021941492 Question Type : MCQ Option Shuffling : Yes Display Question Number : Yes Is Question Mandatory : No Single Line Question Option : No Negative Marks Display Text : 1/3 Option Orientation : Vertical Correct Marks : 1 Wrong Marks : 0.33

Runs scored by a batsman in five matches are 102, 85, 83, 75 and 80. Calculate the variance of this data.

Options :

- 1. ✖ 80.5
- 2. ✖ 81.7
- 3. ✔ 83.6
- 4. ✖ 85.4

Question Number : 143 Question Id : 2021941493 Question Type : MCQ Option Shuffling : Yes Display Question Number : Yes Is Question Mandatory : No Single Line Question Option : No Negative Marks Display Text : 1/3 Option Orientation : Vertical Correct Marks : 1 Wrong Marks : 0.33

The mean of 18 observations is 25 and on adding four more observations, the new mean becomes 29. What is the mean of the last four observations?

Options :

- 1. ✖ 25
- 2. ✖ 29
- 3. ✖ 41
- 4. ✔ 47

Question Number : 144 Question Id : 2021941494 Question Type : MCQ Option Shuffling : Yes Display Question Number : Yes Is Question Mandatory : No Single Line Question Option : No Negative Marks Display Text : 1/3 Option Orientation : Vertical Correct Marks : 1 Wrong Marks : 0.33

The coefficient of variation of two distributions are 75 and 80, and their standard deviations are 15 and 16, respectively. What are their arithmetic means?

Options :

- 1. ✖ 5 and 5, respectively
- 2. ✖ 5 and 6, respectively
- 3. ✔ 20 and 20, respectively
- 4. ✖ 500 and 500, respectively

Question Number : 145 Question Id : 2021941495 Question Type : MCQ Option Shuffling : Yes Display Question Number : Yes Is Question Mandatory : No Single Line Question Option : No Negative Marks Display Text : 1/3 Option Orientation : Vertical Correct Marks : 1 Wrong Marks : 0.33

Study the following graph carefully and answer the given questions.

The line graph shows the number of LED TVs of brand X and Y sold at an electronic shop in different years.



Find the average number of TVs of brand Y sold over the years.

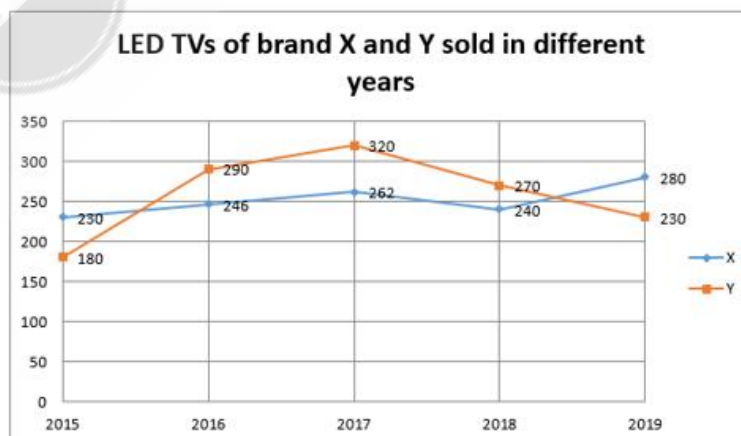
Options :

1. ✖ 240
2. ✖ 250
3. ✔ 258
4. ✖ 260

Question Number : 146 Question Id : 2021941496 Question Type : MCQ Option Shuffling : Yes Display Question Number : Yes Is Question Mandatory : No Single Line Question Option : No Negative Marks Display Text : 1/3 Option Orientation : Vertical Correct Marks : 1 Wrong Marks : 0.33

Study the following graph carefully and answer the given questions.

The line graph shows the number of LED TVs of brand X and Y sold at an electronic shop in different years.



By what percent sale of TV of brand X is increased from 2018 to 2019?

Options :

1. ✖ 14.28%

2. ✔ 16.66%

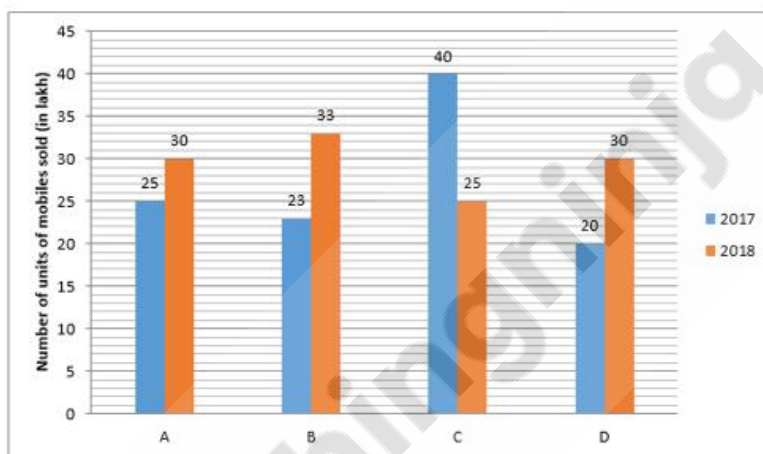
3. ✖ 18.50%

4. ✖ 20.60%

Question Number : 147 Question Id : 2021941497 Question Type : MCQ Option Shuffling : Yes Display Question Number : Yes Is Question Mandatory : No Single Line Question Option : No Negative Marks Display Text : 1/3 Option Orientation : Vertical Correct Marks : 1 Wrong Marks : 0.33

Study the following graph carefully and answer the given questions.

The bar graph shows the number of units of mobiles of different brands sold during 2017 and 2018.



Which mobile brand has recorded the highest percentage increase in sale during 2018 in comparison to its sale in 2017?

Options :

1. ✖ A

2. ✖ B

3. ✖ C

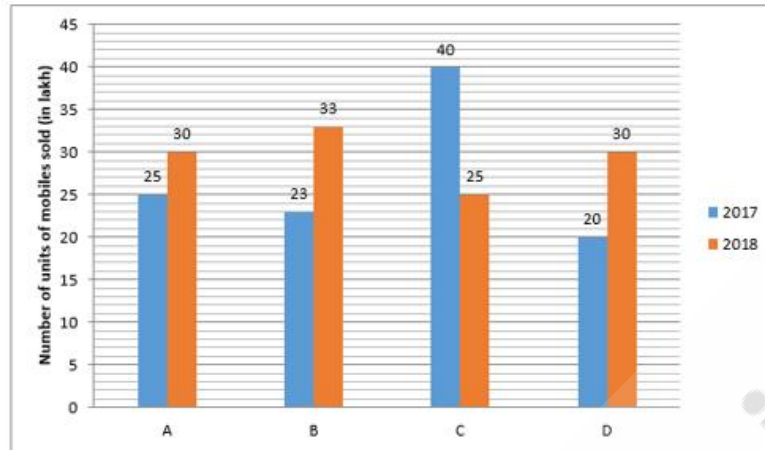
4. ✔ D

Question Number : 148 Question Id : 2021941498 Question Type : MCQ Option Shuffling : Yes Display Question Number : Yes Is Question Mandatory : No Single Line Question Option : No Negative Marks Display Text : 1/3 Option Orientation : Vertical Correct Marks : 1 Wrong Marks : 0.33



Study the following graph carefully and answer the given questions.

The bar graph shows the number of units of mobiles of different brands sold during 2017 and 2018.



What is the ratio of total sale of all the four brands of mobiles in year 2017 to the total sale of all the four brands of mobiles in year 2018?

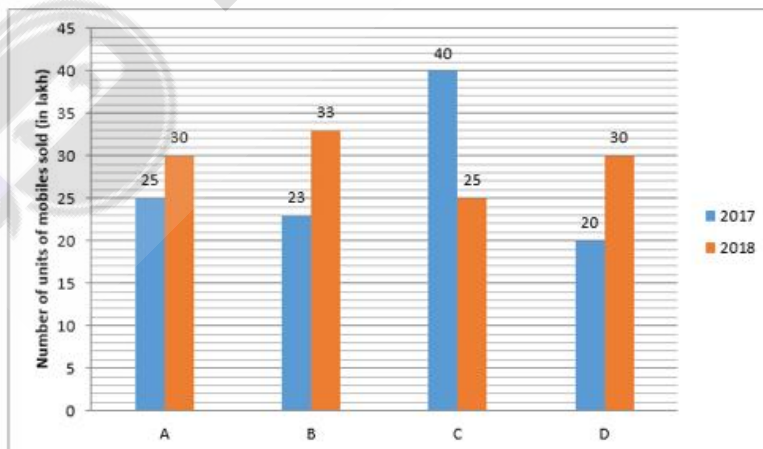
Options :

1. ✖ 59 : 54
2. ✔ 54 : 59
3. ✖ 45 : 58
4. ✖ 58 : 45

Question Number : 149 Question Id : 2021941499 Question Type : MCQ Option Shuffling : Yes Display Question Number : Yes Is Question Mandatory : No Single Line Question Option : No Negative Marks Display Text : 1/3 Option Orientation : Vertical Correct Marks : 1 Wrong Marks : 0.33

Study the following graph carefully and answer the given questions.

The bar graph shows the number of units of mobiles of different brands sold during 2017 and 2018.



By what percent average sale per year of brand A is greater than the average sale per year of brand D?

Options :

1. ✖ 5%
2. ✔ 10%

3. ✖ 15%

4. ✖ 20%

Question Number : 150 Question Id : 2021941500 Question Type : MCQ Option Shuffling : Yes Display Question Number : Yes Is Question Mandatory : No Single Line Question Option : No Negative Marks Display Text : 1/3 Option Orientation : Vertical Correct Marks : 1 Wrong Marks : 0.33

Study the following graph carefully and answer the given questions.

The line graph shows the number of foreigners visiting city X and Y during different months in a year.



What is the difference in average number of foreigners visiting city X per month in January, March, April and June and average number of foreigners visiting city Y per month in February, March, April and May?

Options :

1. ✖ 70

2. ✖ 65

3. ✔ 55

4. ✖ 40