



# Teachingninja.in



**Latest Govt Job updates**



**Private Job updates**



**Free Mock tests available**



**Visit - [teachingninja.in](https://teachingninja.in)**

# OSSC CGL Spl.

Previous Year Paper  
04 Aug, 2024





Do not open the Seal of the Question Booklet until you are a

Question Booklet Code:

A

Question Booklet Series No

Time Allowed: **120 Minutes**

Total Questions: **150**

Maximum Marks: **150**

There shall be negative marking @ **0.25 mark per question** for wrong/multiple answers

Before answering any question, check the booklet that it contains 16 pages and no page is missing, mutilated or repeated. In case of defect, get it replaced immediately.

### INSTRUCTIONS FOR CANDIDATES

1. Fill in the OMR answer sheet, mentioning the Roll No. and other data as required in the place(s) indicated therein. Darken the appropriate circles in blue or black ball point pen only. Do not write any name / surname or put any symbol, sign, slogan, prayer or any mark of identification in the OMR answer sheet. Do not tamper with the bar-code or any other portion of the OMR answer sheet. Any such act is liable to render the answer sheet unfit for evaluation.
2. Correcting fluid, eraser, blade, books, textual material, script notes / loose paper, calculator, docupen, slide rules, log tables / electronic watches, smart watch, cell phone, pager, electrical/ electronic devices etc, are not allowed inside the examination hall. In case the candidate is found to be in possession of any of the above, he / she shall be expelled from the examination without any enquiry as to whether the same was / were used by the candidate or not.
3. A machine will read the coded information furnished by you in the OMR Answer Sheet. If the information so furnished by you is incomplete or different from what you have given in the application form, you shall be awarded Zero mark.
4. Answer must be given by completely darkening one of the four circles / ovals representing the most appropriate answer given on the Answer Sheet corresponding to the relevant question. For answers not shown by properly darkening in black / blue ball point pen, no marks shall be awarded.
5. No Rough work should be done on the OMR Answer Sheet, Space for rough work has been provided in the Question Booklet itself.
6. After the examination is over, candidates must ensure to fold the OMR Answer Sheet at the perforation and separate the Original Copy and Candidate's Copy of the Two Part OMR Answer Sheet in the presence of the Invigilator and handover the Original Copy to the Invigilator. The Candidate's Copy of the OMR Answer sheet may be taken by the candidate. Failure to hand over the original copy of the OMR Answer Sheet to the Invigilator before leaving the examination hall / room shall make the candidate liable for penal action.
7. Candidates may take with them the respective question-booklet after the examination is over.
8. Failure to comply with or violation of any of the above instructions shall be considered as adopting unfair means and action as deemed proper shall be taken.

SEAL

LMBU\_ENG\_A-1



## ARITHMETIC

1. A certain number when divided by 899 leaves the remainder 63. Find the remainder when the same number is divided by 29?
  - a) 5
  - b) 4
  - c) 1
  - d) Cannot be determined
2. What approximate value will come in place of question mark (?) in the equation given below?  
 $(41.99^2 - 18.04^2) - ? = 13.11^2 - 138.99$ 
  - a) 4004
  - b) 1720
  - c) 1410
  - d) 8432
3. Sum of A's and B's age 12 years ago was 176. A's age 36 years ago was equal to B's age 12 years ago. Find the present age of A?
  - a) 112 years
  - b) 128 years
  - c) 84 years
  - d) 104 years
4. In a class there are 35 girls and 20 boys. Total average weight of class is 38 kg. Total average weight of boys is 52 kg. Find the average weight of girls?
  - a) 32 kg
  - b) 30 kg
  - c) 52 kg
  - d) 35 kg
5. What should come in place of question mark (?) in the following number series?  
13, 15, 25, 55, 123, ?
  - a) 234
  - b) 293
  - c) 253
  - d) 208
6. A sequence of seven consecutive integers is given. The average of the first five given integers is 37. Find the average of all the seven integers.
  - a) 35
  - b) 38
  - c) 40
  - d) 41
7. The Salary of a worker is first increased by 5% and then it is decreased by 5%. What is the overall change in his salary compared to original salary?
  - a) 0.25% increase
  - b) 0.5% increase
  - c) 0.25% decrease
  - d) 0.5% decrease
8. If 3.5% of income is taken as tax and 12.5% of the remaining is saved, this leaves ₹ 4053 to spend. What is the income?
  - a) ₹ 4500
  - b) ₹ 4900
  - c) ₹ 4800
  - d) ₹ 5000
9. Two numbers are in the ratio 3 : 5. If 9 is subtracted from each, the ratio becomes 12 : 23. Find the greater number.
  - a) 85
  - b) 115
  - c) 55
  - d) 35
10. Saurav, Dolly and Dimple subscribe together ₹50,000 for a business. Saurav subscribes ₹4000 more than Dolly and Dolly ₹5000 more than Dimple. Out of a total profit of ₹ 35,000 Saurav receives:
  - a) ₹ 7300
  - b) ₹ 14700
  - c) ₹ 12600
  - d) ₹ 9250
11. A dishonest dealer professes to sell his goods at cost price, but he uses a weight of 960g for the kg weight. Find his gain percent.
  - a) 4 %
  - b)  $4\frac{1}{6}$  %
  - c) 4.5 %
  - d) 4.9 %
12. If the Cost Price of 15 tables is equal to the Selling Price of 20 tables, find the loss percentage.
  - a) 25%
  - b) 20%
  - c) 40%
  - d) 15%
13. The difference between Compound Interest and Simple Interest for 2 years at the rate of 12% per annum on ₹5000 will be:



- a) ₹ 47.50  
b) ₹ 63  
c) ₹ 72  
d) ₹ 45
14. Akash is half good a workman as Bimal and together they finish a job in 14 days. In how many days working alone will Bimal finish the job?  
a) 21 days  
b) 25 days  
c) 28 days  
d) 18 days
15. Five men prepare 10 toys in 6 days working 6 hrs a day. Then, in how many days can 12 men prepare 16 toys working 8 hrs a day?  
a) 3 days  
b) 4 days  
c) 5 days  
d) 6 days
16. If 6 men working 8 hours a day earn ₹ 1680 per week, then how much will 9 men working 6 hours a day earn per week?  
a) ₹ 1740  
b) ₹ 1890  
c) ₹ 2050  
d) ₹ 2230
17. A boy walking at a speed of 10km/hr reaches his school 12 minutes late. Next time, at a speed of 15km/hr he reaches his school 7 minutes late. Find the distance of his school from his house.  
a) 1 km  
b) 1.5 km  
c) 2 km  
d) 2.5 km
18. Two cyclists A and B start from the same place to ride in the same direction. A starts at noon at 8 km/hr and B at 1:30pm at 10km/hr. How far will A have ridden before he is overtaken by B?  
a) 40km  
b) 50km  
c) 60km  
d) 70km
19. Find the greatest number that will divide 43, 91 and 183 so as to leave the same remainder in each case.  
a) 4  
b) 7  
c) 9  
d) 13
20. A boat can travel at a speed of 13 km/hr in still water. If the speed of the stream is 4 km/hr, find the time taken by the boat to go 68 km downstream.  
a) 2 hours  
b) 3 hours  
c) 4 hours  
d) 5 hours
21. In a 200 metres race A beats B by 35 m or 7 seconds. A's time over the course is:  
a) 40 sec  
b) 47 sec  
c) 33 sec  
d) 35 sec
22. A tank is filled in 5 hours by three pipes A, B and C. The pipe C is twice as fast as B and B is twice as fast as A. How much time will pipe A alone take to fill the tank?  
a) 20 hours  
b) 25 hours  
c) 35 hours  
d) 30 hours
23. A merchant has 1000 kg of sugar, part of which he sells at 8% profit and the rest at 18% profit. He gains 14% on the whole. The quantity sold at 18% profit is:  
a) 400 kg  
b) 560 kg  
c) 600 kg  
d) 640 kg
24. A fruit seller had some apples. He sells 40% apples and still has 420 apples. Originally, he had:  
a) 588 apples  
b) 600 apples  
c) 672 apples  
d) 700 apples
25. The salaries A, B, C are in the ratio 2 : 3 : 5. If increments of 15%, 10% and 20% respectively are allowed in their salaries, then what will be new ratio of their salaries?  
a) 3 : 3 : 10  
b) 10 : 11 : 20  
c) 23 : 33 : 60  
d) Cannot be determined
26. There is 60% increase in an amount in 6 years at simple interest. What will be the compound interest of Rs. 12,000 after 3 years at the same rate?  
a) Rs. 2160



- b) Rs. 3120
- c) Rs. 3972
- d) Rs. 6240

27. A train 125 m long passes a man, running at 5 km/hr in the same direction in which the train is going, in 10 seconds. The speed of the train is:

- a) 45 km/hr
- b) 50 km/hr
- c) 54 km/hr
- d) 55 km/hr

28. A man has Rs.480 in the denominations of one-rupee notes, five-rupee notes and ten-rupee notes. The number of notes of each denomination is equal. What is the total number of notes that he has ?

- a) 45
- b) 60
- c) 75
- d) 90

29. In a regular week, there are 5 working days and for each day, the working hours are 8. A man gets Rs. 2.40 per hour for regular work and Rs. 3.20 per hours for overtime. If he earns Rs. 432 in 4 weeks, then how many hours does he work for?

- a) 160
- b) 175
- c) 180
- d) 195

30. The price of 10 chairs is equal to that of 4 tables. The price of 15 chairs and 2 tables together is Rs. 4000. The total price of 12 chairs and 3 tables is:

- a) Rs. 3500
- b) Rs. 3750
- c) Rs. 3840
- d) Rs. 3900

31. If you write down all the numbers from 1 to 100, then how many times do you write 3 ?

- a) 11
- b) 18
- c) 20
- d) 21

32. The length of a rectangular plot is 20 metres more than its breadth. If the cost of fencing the plot at the rate of Rs. 26.50 per metre is Rs.5,300, what is the length of the plot (in metres)?

- a) 40
- b) 50
- c) 60
- d) Data inadequate

33. A 240 metre long train running at the speed of 60 kmph will take how much time to cross another 270 metre long train running in opposite direction at the speed of 48 kmph?

- a) 17 seconds
- b) 3 seconds
- c) 12 seconds
- d) 8 seconds

34. What should come in place of the question mark "?" in the following number series ?

722, 363, 124, 35, ?, 8

- a) 18
- b) 10
- c) 32
- d) 12

35. The difference between the digits of a two-digit number is one-ninth of the difference between the original number and the number obtained by interchanging the positions of the digit. What definitely is the sum of digits of that number?

- a) 5
- b) 14
- c) 12
- d) Data inadequate

### DATA INTERPRETATION

**Directions (Questions 36 to 40):** Answer these questions on the basis of the information given below.

In a class of 80 students, girls and boys are in the ratio of 3 : 5. The students can speak only Hindi or only English or both Hindi and English. The number of boys and number of girls who can speak only Hindi is equal and each of them is 40% of the total number of girls. 10% of the girls can speak both the languages and 58% of the boys can speak only English.

36. How many girls can speak only English?

- a) 12
- b) 29
- c) 18
- d) 15

37. In all, how many boys can speak Hindi?

- a) 12
- b) 9
- c) 24
- d) None of these



38. What percentage of all the students ( boys and girls together) can speak only Hindi?

- a) 24
- b) 40
- c) 50
- d) 30

39. In all, how many students ( boys and girls together) can speak both the languages?

- a) 15
- b) 12
- c) 9
- d) 29

40. How many boys can speak either only Hindi or only English?

- a) 25
- b) 38
- c) 41
- d) 29

**Directions ( Questions 41 to 45):** Study the following information carefully and answer the questions given below.

The given table shows the number of boys living on first, second and third floors in five different buildings (Some data is missing).

Buildings	First Floor	Second Floor	Third Floor
P	60		60
Q		105	
R	150		75
S		90	50
T	105	60	

41. If the average number of boys living in Q is 105 and the ratio of the number of boys living on first to third floor in Q is 3:4, then find the difference between the number of boys living in first and second floor in Q?

- a) 12
- b) 9
- c) 15
- d) 35

42. If the total number of boys living in P and R is 200 and 300 respectively, then find the average number of boys living on second floor in all the buildings together.

- a) 78
- b) 68
- c) 80
- d) 82

43. Ratio of the number of boys living on first floor in S to the number of boys living on third floor in T is 6:7. If the number of boys living in first floor in S is 20% more than the number of boys living on third floor in R, then what is the difference between the total number of boys living in S and T?

- a) 40
- b) 30
- c) 60
- d) 20

44. What is the ratio of total number of boys in building T to the total number of boys in Q?

- a) 3:4
- b) 5:6
- c) 6:7
- d) 7:8

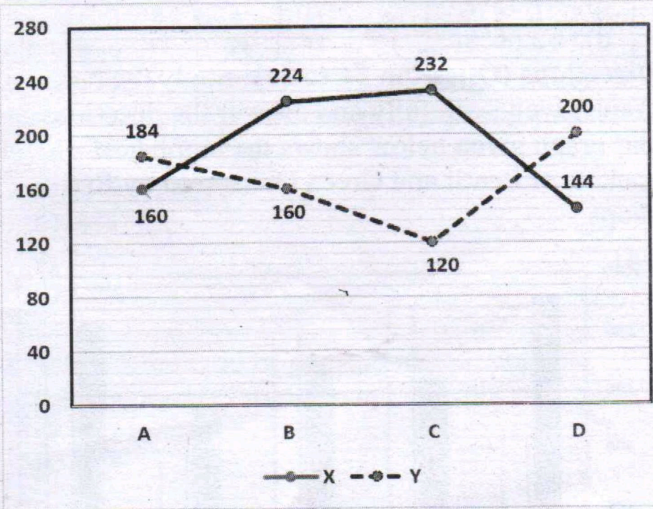
45. How many boys reside in all the five buildings taken together?

- a) 1280
- b) 1300
- c) 1315
- d) 1345

**Directions (Questions 46 to 50):** Study the following information carefully and answer the questions given below.

The given line graph shows the total number of questions viewed by two students X and Y in 4 different subjects (A,B,C,D ) in an online test.

The total number of questions in each subject =300





46. Total number of questions viewed by student X in A and C together is approximately what percentage of total number of questions viewed by student Y in B and D together?

- a) 70%
- b) 108%
- c) 90%
- d) 110%

47. Find the percentage of questions viewed by student Y in C and D together.

- a) 27.3%
- b) 47.235%
- c) 53.33%
- d) 37%

48. Find the ratio between the total number of questions viewed by student X in B and D together to that of student Y in A and C together.

- a) 12:17
- b) 23:25
- c) 31:37
- d) 23:19

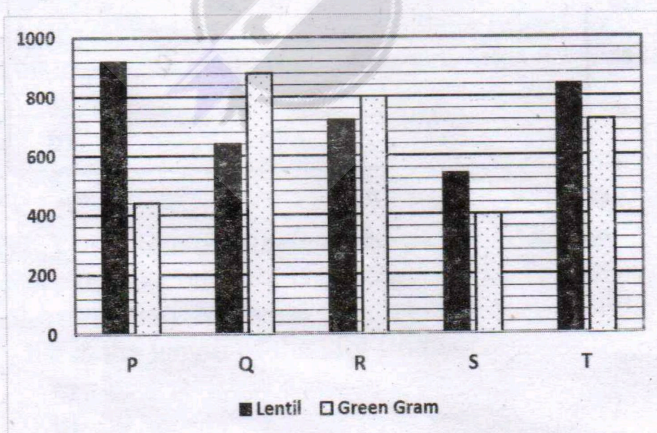
49. Find the difference between the total questions viewed by student X to that of student Y in all the given subjects together.

- a) 96
- b) 92
- c) 90
- d) 98

50. Find the percentage of questions viewed by both the students in A.

- a) 54%
- b) 48.26%
- c) 57.33%
- d) 62.66%

**Directions (Question 51 to 55):** Study the bar graph given, carefully and answer the questions. Bar graph given below shows the number of packets of Lentil and Green Gram sold by five shops.



51. Total number of packets (of both Lentil and Green Gram) sold by shop R is approximately what percentage more or less than the number of packets sold by shop T?

- a) 3%
- b) 5%
- c) 12%
- d) 23%

52. What is the ratio of number of packets of Lentil sold by shop P and S together to number of packets of Green Gram sold by shop P and T together?

- a) 2:1
- b) 73:58
- c) 43:41
- d) 41:23

53. Lentil packets sold by shop P and Q together is what percent more or less than Green Gram packets sold by R and S together?

- a) 25%
- b) 20%
- c) 30%
- d) 35%

54. If another shop U sold number of Lentil packets which is average of number of Lentil packets sold by shop R, S, T and Number of Green Gram packets sold is average of number of Green Gram packets sold by shop P and T. If shop Q sold each packet at ₹260 and Shop U sold each packet at 40% more than that of Q, then find total price collected by shop U.

- a) ₹ 24246
- b) ₹ 456902
- c) ₹ 465920
- d) ₹ 32863

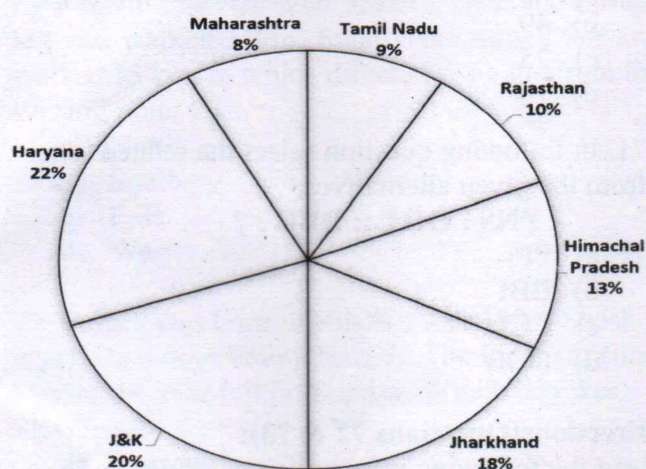
55. What is the difference between total number of Lentil packets sold by all shops together and number of Green Gram packets sold by all shops together?

- a) 480
- b) 540
- c) 420
- d) 360

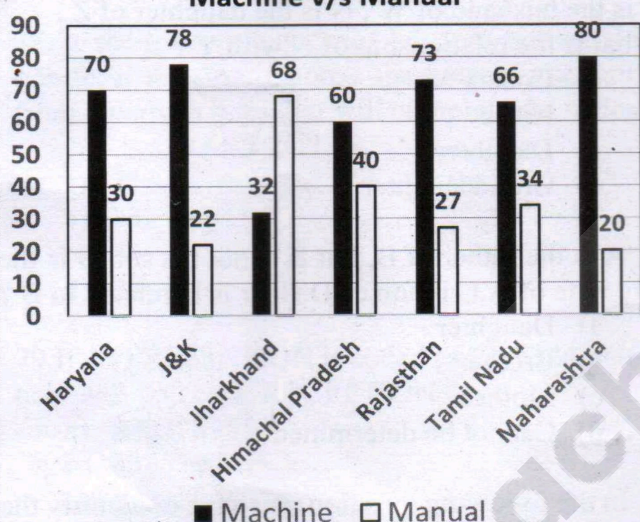
**Directions(Questions 56 to 60):** Study the given Pie chart and Bar graph together to answer the question below.



# **PRODUCTION OF RICE IN DIFFERENT STATES** **TOTAL PRODUCTION = 50 LAKH TONNES**



## **Production Ratio in different states : Machine v/s Manual**



56. What is the difference between the production by machine and the production by manual method in Rajasthan?

- 2.5 lakh
- 2.3 lakh
- 2.8 lakh
- 2.7 lakh

57. What is the ratio of production by manual method in Tamil Nadu to that of machine method in J&K?

- 9 : 40
- 99 : 260
- 51 : 260
- 33 : 130

58. What is the average production of rice by machine method for all states?

- 4.24
- 4.28
- 4.32
- 4.46

59. The production by machine method in Haryana is approximately what percent greater than the production by manual method in Maharashtra?

- 130%
- 135%
- 140%
- 145%

60. The production of rice in Himachal Pradesh by manual method is approximately how many times the production by machine method in Jharkhand?

- 1.2
- 1.5
- 0.9
- 1

**Directions (Questions 61 to 65):** Study the following table to answer the given questions.

Number of students of different classes of a school playing different games							
Class	XII	XI	X	IX	VIII	VII	VI
Games							
Chess	11	12	5	4	2	2	1
Cricket	38	40	12	17	25	18	20
Basketball	11	9	7	6	0	0	0
Table Tennis	9	9	21	19	11	9	0
Football	40	27	18	19	12	16	14
Carrom	16	15	8	19	12	16	14
Tennis	8	9	11	5	6	0	0
Badminton	47	39	33	21	19	0	0

61. Students of class VIII playing cricket is approximately what percentage of the total students playing cricket?

- 13%
- 4%
- 25%
- 15%

62. What is the ratio of the students playing Football in class XI to those in Class X?

- 1:2
- 2:5
- 2:3
- 3:2

63. Which game is the most popular in terms of number of students playing it?

- Badminton



- b) Football
- c) Carrom
- d) Cricket

64. Approximately what percent of Class X students play Table Tennis out of the total Class X students playing the different given games?

- a) 20
- b) 21
- c) 18
- d) 27

65. Which game has ascending number of Students from Class IX to Class XII?

- a) Only Basketball
- b) Only Badminton
- c) Chess and Badminton
- d) Basketball and Badminton

## LOGICAL REASONING

**Directions(Questions 66 to 70):**

In each of the following questions select the related number from the given alternatives.

66.  $352:30$   
 $296:108$   
 $628: ?$

- a) 306
- b) 96
- c) 314
- d) 36

67.  $9:24 :: ? : 6$

- a) 3
- b) 2
- c) 1
- d) 5

68.  $27:9 :: 64 : ?$

- a) 8
- b) 12
- c) 16
- d) 20

69.  $7:50 :: 11 : ?$

- a) 120
- b) 121
- c) 122
- d) 132

70.  $100:121 :: 36 : ?$

- a) 64
- b) 49
- c) 25
- d) 16

71. In following question select the related letter from the given alternatives.

**PNS : OOT :: DBH : ?**

- a) PPI
- b) BBI
- c) CCI
- d) DDB

**Directions(Questions 72 & 73):**

Read the following information carefully and answer the questions based on it.

72. X is the husband of Y. W is the daughter of X. Z is the husband of W. N is the daughter of Z. What is the relationship of N with Y?

- a) Cousin
- b) Niece
- c) Daughter
- d) Granddaughter

73. A is the father of B, but B is not his son. D is the only wife of A. C is son of D. How is D related to B?

- a) Daughter
- b) Brother
- c) Mother
- d) Cannot be determined

74. In the following question you have to identify the correct response from the given premises started according to following symbols:

If “-” stands for division “+” stands for subtraction, “÷” stands for multiplication, “x” stands for addition, then which one of the following equation is correct?

- a)  $70 - 2 + 4 \div 5 \times 6 = 44$
- b)  $70 - 2 + 4 \div 5 \times 6 = 21$
- c)  $70 - 2 + 4 \div 5 \times 6 = 341$
- d)  $70 - 2 + 4 \div 5 \times 6 = 36$

75. Rahul travels 10km towards East, then he takes a left turn and travels 3km. He then takes a right turn and travels 5km, he again takes a right turn and travels 8km and finally takes a right turn one more time and travels 3km. How far is he from his starting point and in which direction?

- a) 12km towards South-East
- b) 13km towards North-West
- c) 12km towards North-West
- d) 13km towards South-East



76. Anita walked 20km towards north. Then she turned right and walked 30km. Then she turned right again and travelled 35km. Then she moved left and walked 15km. Finally she turned left and walked 15 km. In which direction was she from the starting point ?

- a) North
- b) South
- c) East
- d) West

77. Suresh was born on 4th October 1999. Shashi was born 6 days before Suresh. The Independence Day of the year fell on Sunday. Which day was Shashi born ?

- a) Tuesday
- b) Wednesday
- c) Monday
- d) Sunday

78. In the following question ,a series is given with one term missing. Choose the correct alternative from the given ones that will complete the series.

**3,6,12,21,?,48**

- a) 31
- b) 33
- c) 34
- d) 38

79.If APPRECIATION is coded as 177832419465, how will you code RECEPTION ?

- a) 832378365
- b) 832379465
- c) 832389465
- d) 832397645

80. In the following question a word is followed by four other words, one of which cannot be formed by using the letters of the given word. Find this word.

#### COMPREHENSION

- a) COMPRISE
- b) PENSION
- c) ONION
- d) ROAM

81.In an examination, Rahul got the 11th rank and he was 47th from the bottom among those who passed. 3 students could not appear for the exam .1 student failed.What is the total number of students ?

- a) 60
- b) 62

- c) 59
- d) 61

82. Five movies F1,F2,F3,F4 and F5(not necessarily in the same order)are displayed from Monday to Friday. Only one movie is displayed on one day. Each movie is displayed only one time. Movie F1 is displayed on Monday. Two movies are displayed between F4 and F5. F2 is displayed just one day after F5. Which movie is displayed on Wednesday ?

- a) F2
- b) F3
- c) F4
- d) F5

83. The age of Ram is double as that of Shyam and half as that of Suresh. If the sum of their ages is 70, what is the age of Ram ?

- a) 20
- b) 30
- c) 40
- d) 10

84. An official meeting is attended by 130 department employees . Out of them,66 drink tea, 56 drink coffee and 63 drink juice. 27 can drink either tea or coffee , 25 can drink coffee or juice and 23 can drink juice and tea. 5 employees can drink any of the three. How many drink only tea ?

- a) 21
- b) 22
- c) 18
- d) 20

85. If SUPER=79 , SUPREME = 97. Then LABOUR = ?

- a) 79
- b) 69
- c) 89
- d) 49

86. In a group of 20 people, 8 read Hindi, 11 read English while 5 of them read none of these two. How many of them read Hindi and English both ?

- a) 8
- b) 6
- c) 4
- d) 2

87. In a row, 25 trees are planted at equal distance from each other . The distance between 1st and 25th tree is 30 m. What is the distance between 3rd and 15th tree ?



- a) 8m
- b) 15m
- c) 16m
- d) 18m

88. Among four books, Book 1 is twice as heavy as Book 2. Book 3's weight is half of Book 2's weight. Book 4 is 60 grams more as compared to Book 2 but 60 gram less as compared to Book 1. Which book is the heaviest?

- a) Book 1
- b) Book 2
- c) Book 3
- d) Book 4

89. There are fourteen teams playing in a tournament. If every team plays one match with every other team, how many matches will be played in the tournament?

- a) 66
- b) 78
- c) 91
- d) 101

90. Three persons A, B and C have different amount of rupees with them. If A gives Rs.11 to C, A will have equal amount as B has. A and B together have total Rs.245. How many rupees does B have?

- a) Rs. 116
- b) Rs. 118
- c) Rs. 117
- d) Rs. 119

91. In a class of 100 students, every student has passed in one or more of the three subjects, i.e. History, Economics and English. Among all the students, 24 students have passed in English only, 14 students have passed in History only, 11 students have passed in both English and Economics only, and 12 students have passed in both English and History only. A total of 50 students have passed in History. If only 5 students have passed in all three subjects, then how many students have passed in Economics only?

- a) 10
- b) 20
- c) 18
- d) 15

92. A private taxi company charges fixed charge along with a per kilometre charge based on the distance covered. For a journey of 24 kms, the charges paid are Rs.368 and for a journey of 32 kms,

the charges paid are Rs.464. How much will a person have to pay for travelling a distance of 15km?

- a) Rs.290
- b) Rs.260
- c) Rs.280
- d) Rs. 180

93. In a class of 98 students, all play at least one of three games- snooker, chess and tennis. 42 students play snooker, 49 play tennis and 43 play chess. The total number of students who play any and only two games is 29. 5 students play all the three games. The number of students who play only snooker and only chess is equal. 11 students play only snooker and tennis. 6 students play only snooker and chess. How many students play only tennis?

- a) 21
- b) 23
- c) 20
- d) 22

#### Directions(Questions 94 & 95):

Arrange the given words in the sequence in which they occur in the dictionary:

94. 1. Vicinity  
2. Victory  
3. Vanity  
4. Vapour  
5. Variety

- a) 34512
- b) 12345
- c) 54231
- d) 42315

95. 1. Exception  
2. Exceptional  
3. Exchanging  
4. Exchanged  
5. Excess

- a) 12543
- b) 21453
- c) 42531
- d) 32154

96. In a certain code language Sue Re Nik means "She is brave", Pi Sor Re Nik means "She is always smiling" and Sor re Zhi means "Is always cheerful". What is the code used for the word "smiling"?

- a) Nik



- b) Re
- c) Pi
- d) Sor

97. There are two statements followed by two conclusions I and II . Assuming the Statements are true, decide which one of the conclusions logically follows , disregarding commonly known facts .

**Statements :**

- a) All poets are intelligent.
- b) All singers are intelligent.

**Conclusions :**

- I .All singers are poets.
- II. Some intelligent persons are not singers.
  - a) Only conclusion I follows
  - b) Only conclusion II follows
  - c) Either conclusion I or II follows
  - d) Neither conclusion I or II follows

98. Two statements are given below followed by four alternative inferences. Select the one which is most appropriate .

**Statements :**

- a) All radios sold in that shop are of high standard.
- b) Some of Murphy radios are sold in that shop.

**Conclusions :**

- I. All radios of high standard are manufactured by Murphy company.
- II. Some of the Murphy radios are of high standard.
- III. None of the Murphy radios is of high standard.
- IV. Some of the Murphy radios of high standard are sold in that shop.
  - a) I and II inferences only
  - b) II and IV inferences only
  - c) I and III inferences only
  - d) I and IV inferences only

99. A boat can travel with a speed of 30km/hr in still water . If the speed of the stream is 6km/hr. find the time taken by the boat to go 108 kms downstream.

- a) 2hrs
- b) 5hrs
- c) 3hrs
- d) 4hrs

100. A man is climbing up a wall which is 24 meters high. He climbs 16meters during the day but slips back by 3meters 40centimeters in the evening. How far had the man reached on that day ?

- a) 19meters 40centimeters
- b) 12.6meters
- c) 11.4meter
- d) 12meters 40centimeters

## CURRENT AFFAIRS

101. Who is the Prime Minister of UK ?

- a) Rishi Sunak
- b) Keir Starmer
- c) Boris Johnson
- d) Liz Truss

102. Which coalition won the largest number of seats in French Parliamentary Election recently ?

- a) Alliance led by National Rally
- b) Alliance of leftist Parties (New Popular Front )
- c) Macron's Ensemble alliance
- d) None of the above

103. Who was elected the President of Iran recently ?

- a) Masoud Pezeshkian
- b) Mostafa Pourmohammadi
- c) Mohammad Bagher Ghalibaf
- d) Saeed Jalili

104. Who emerged as the Champion in Wimbledon 2024 (men's single's) ?

- a) L Musetti
- b) N Djokovic
- c) C Alcaraz
- d) D Medvedev

105. Who emerged as the Champion in Wimbledon 2024 (women's single's) ?

- a) D Vekic
- b) J Palini
- c) E Rybakina
- d) B Krejckikova

106. Who won the EURO Cup Football in July 2024 ?

- a) Spain
- b) France
- c) Netherlands
- d) England

107. A few fatal road accidents have brought road accidents in focus. How many lives were lost due to road accidents in India in 2022 (latest year for which complete data available) as per Government of India data ?

- a) 2,68,491
- b) 68,491
- c) 1,68,491
- d) 368,491



108. Who was the Indian (woman) flag bearer for the opening ceremony of Paris Olympics 2024 ?

- a) P.V Sindhu
- b) Nikhat Zareen
- c) Rajeshwari Kumari
- d) Mirabai Chanu

109. Who is the Chief Minister of Jharkhand ?

- a) Hemant Soren
- b) Champai Soren
- c) Raghubar Das
- d) Shibu Soren

110. Hezbollah has been launching missile attacks on Israel . Primarily from territory of which country has Hezbollah been Launching such attacks ?

- a) Jordon
- b) Lebanon
- c) Syria
- d) Yemen

111. There was a stampede near Hathras leading to death of over 100 persons. In which state is Hathras located ?

- a) Madhya Pradesh
- b) Uttar Pradesh
- c) Himachal Pradesh
- d) Andhra Pradesh

112. Which country joined as a member of Shanghai Co-Operation Organization in July 2024 ?

- a) Pakistan
- b) Mongolia
- c) Afghanistan
- d) Belarus

113. Why was appointment of Canada Chief of Defence staff in news ?

- a) He is the First immigrant to be so appointed.
- b) He is the first gay person to be so appointed.
- c) She is the first women to be so appointed.
- d) None of the above

114. Where are D. Gukesh and Ding Liren going to play FIDE World Championship match 2024 ?

- a) Chennai
- b) Singapore
- c) Moscow
- d) San Francisco

115. Where is the summer Olympics scheduled to be held in 2028 ?

- a) Paris
- b) Los Angeles
- c) Shanghai
- d) Brisbane

116. The Cayman Islands was recently in news due to Hurricane Beryl. It is part of :

- a) United States
- b) Mexico
- c) British Overseas Territories
- d) Barbados

117. Shri Surendra Nath Naik died in July after a distinguished public life . How many times was he elected to Odisha Legislative Assembly?

- a) 5
- b) 6
- c) 7
- d) 8

118. Three Indian Players declared their retirement from T-20, after India won the World Cup in 2024. Who among the following was not one of them ?

- a) Virat Kohli
- b) Rohit Sharma
- c) Ravindra Jadeja
- d) Rishabh Pant

119. Which country recently (June-2024) adopted a law for a six day work week ?

- a) U.K
- b) Denmark
- c) Greece
- d) U.S.A

120. Julian Assange is one of WIKILEAKS founder alleged to have violated US Espionage Law by publishing sensitive data. What is the present position of the case ?

- a) He was granted asylum by Equador and continues to live in Equador.
- b) He is released after a plea bargain with US Authorities and lives in Australia.
- c) He is convicted in a sexual assault case is Sweden and is presently in Swedish Jail.
- d) He is fighting against his extradition to US while living in UK.

121. The Prime Minister of India recently visited Austria. Who is the Austrian Chancellor with whom he held discussion ?



- a) Brigitte Bierlein
- b) Sebastian Kurz
- c) Karl Nehammer
- d) Alexander Schallenberg

122. Who has been appointed as the Prime Minister of Nepal recently ?

- a) K.P Sharma Oli
- b) Sher Bahadur Deuba
- c) Pushpa Kamal Dahal alias Prachanda
- d) Ram Chandra Paudel

123. Prime Minister Mr. Narendra Modi was conferred the highest civilian honour of Russia during his visit in July 2024. What is the name of the honour ?

- a) The Order of St Andrew the Apostle
- b) Order of Honour
- c) Gold Star
- d) Hero of Labour of Russian Federation

124. Who won COPA America 2024 ?

- a) Columbia
- b) Argentina
- c) Canada
- d) Uruguay

125. Who has been identified as the person, who tried to assassinate Ex USA President Donald Trump recently (July 2024) ?

- a) Thomas Mathew Crooks
- b) John Hinckley Jr
- c) Sara Jane Moore
- d) Sirhan Sirhan

126. Who is the Cabinet Minister in Union Govt. in charge of Ministry of Rural Development?

- a) Shri Rajiv Ranjan Singh alias Lalan Singh
- b) Shri Manohar Lal
- c) Shri Shivraj Singh Chouhan
- d) Shri Giriraj Singh

127. Who is the Cabinet Minister in Union Govt. in charge of Ministry of Corporate Affairs?

- a) Shri Piyush Goyal
- b) Smt. Nirmala Sitharaman
- c) Shri Jyotiraditya M. Scindia
- d) Shri Bhupendra Yadav

128. Who is the Cabinet Minister in Union Govt. in charge of Ministry of Education?

- a) Shri Gajendra Singh Shekhawat
- b) Shri Dharmendra Pradhan
- c) Shri Giriraj Singh
- d) Smt. Smriti Irani

129. Which Indian fielder took a much celebrated catch at Long off of David Miller ( batsman of South Africa team ) in the last over in T20 World Cup final?

- a) Rohit Sharma
- b) Virat Kohli
- c) Ravindra Jadeja
- d) Surya Kumar Yadav

130. Who is the Minister of State (Independent Charge) of Department of Forest, Environment and Climate Change of Odisha Government ?

- a) Shri Suryabanshi Suraj
- b) Shri Ganesh Ram Singhkhuntia
- c) Shri Pradeep Bal Samanta
- d) Shri Gokulananda Mallik

### **COMPUTER AND INTERNET AWARENESS**

131. How can you select an entire document in Microsoft Word quickly?

- a) Press Ctrl + A
- b) Press Ctrl + S
- c) Press Ctrl + P
- d) Press Ctrl + D

132. How can you insert a table of contents into a Microsoft Word document?

- a) Insert > Table of Contents
- b) References > Table of Contents
- c) Layout > Table of Contents
- d) Page Layout > Table of Contents

133. Which option in Microsoft Word allows you to create and apply a consistent look and feel across multiple documents?

- a) Templates
- b) Styles
- c) Themes
- d) Formatting

134. Which of the following is NOT a valid type of page break in Microsoft Word?

- a) Column break
- b) Text wrap break
- c) Continuous break
- d) Section break

135. How can you freeze the top row in Excel so that it remains visible while scrolling?

- a) View > Freeze Panes > Freeze Top Row
- b) Data > Freeze Panes > Freeze Top Row
- c) Home > Freeze Panes > Freeze Top Row
- d) Insert > Freeze Panes > Freeze Top Row



136. How can you insert a new column to the left of the current column in Excel?
- Home > Insert > Columns
  - Insert > Columns
  - Right-click > Insert > Columns
  - Ctrl + Shift ++
137. How can you apply a filter to a table in Excel to display only records where a specific column contains a certain text string?
- Home > Sort & Filter > Filter
  - Data > Sort & Filter > Filter
  - Review > Sort & Filter > Filter
  - Insert > Sort & Filter > Filter
138. How can you protect a worksheet in Excel from being edited by other users?
- Pivot Tables
  - Scenario Manager
  - Macros
  - Data Tables
139. What is the purpose of the 'Handout Master' in PowerPoint?
- It allows you to print slides with multiple slides per page for handouts.
  - It controls the layout and design of printed speaker notes.
  - It manages the order of slides in a presentation.
  - It applies animations to slide transitions.
140. What is the purpose of the 'Eyedropper' tool in PowerPoint?
- To measure distances between objects on a slide
  - To copy formatting from one object to another
  - To insert images from online sources
  - To select colours from existing objects for formatting
141. What is the purpose of the 'Slide Show Settings' in PowerPoint?
- To adjust the resolution and screen size for presenting slides.
  - To record narrations and timings for each slide.
  - To customize the transition effects between slides.
  - To configure options such as loop presentation and show/hide slide numbers.
142. Which feature in PowerPoint allows you to create a custom animation path for an object?
- Motion Paths
  - Slide Transitions
  - Animation Painter
  - SmartArt
143. What is the purpose of the "Report Wizard" in Microsoft Access?
- To create and modify tables
  - To design forms for data entry
  - To generate printable reports based on tables or queries
  - To import data from external sources
144. In Microsoft Access, what is the shortcut key combination to open the Lookup wizard for a selected field in Design view?
- F2
  - F4
  - Ctrl + F4
  - Ctrl + L
145. What is the shortcut key combination to delete the current record in Datasheet view in MS-Access?
- Ctrl + D
  - Ctrl + Del
  - Ctrl + -
  - Ctrl + X
146. In Access, what does the "Parameterized Query" feature enable you to do?
- Perform calculations on fields in a query
  - Prompt the user to enter criteria when running the query
  - Join multiple tables based on common fields
  - Update records in a table based on specified conditions
147. In email terminology, what does "DNS" stand for?
- Domain Name System
  - Digital Network Service
  - Data Naming Standard
  - Dynamic Network Server
148. Which type of email attack involves sending fraudulent emails that appear to be from reputable sources to deceive individuals into revealing sensitive information?



- a) Phishing
- b) Spoofing
- c) Malware
- d) Spamming

- d) To automatically append contact information or a personalized message at the end of an email

149. What is the purpose of an email "signature" in the context of email communication?

- a) To encrypt the email message
- b) To provide additional security layers
- c) To authenticate the sender

150. Which email header field is used to indicate the sender's email address?

- a) From
- b) To
- c) Subject
- d) CC (Carbon Copy)



Teachingninja.in