



Teachingninja.in



Latest Govt Job updates



Private Job updates



Free Mock tests available

Visit - teachingninja.in



Teachingninja.in

EPFO SSA Stage I

Previous Year Paper
18 Aug, 2023 Shift 1



EPFO SSA EXAM - AUGUST 2023

Application No	
Candidate Name	
Roll No	
Test Date	18/08/2023
Test Time	9:00 AM - 11:30 AM
Subject	Social Security Assistant Stage I Examination

Section : **General Aptitude**

Q.1 Suppose the first and the second letters of the English Alphabet exchange their places also third and the fourth and so on till the end. Then, if all the vowels are removed in the new arrangement thus formed, which letter would be third to the right of the Eighth letter from the right end ?

- | | |
|-----|---|
| (1) | V |
| (2) | H |
| (3) | N |
| (4) | M |

Options

1. 1
2. 2
3. 3
4. 4

Question Type : MCQ
Question ID : 4795481991
Option 1 ID : 4795487905
Option 2 ID : 4795487906
Option 3 ID : 4795487907
Option 4 ID : 4795487908
Status : Answered
Chosen Option : 1

Q.2 The first two words are related in a certain way. Choose the correct option to replace the question mark '(?)' having the same relationship with the third word :

Fragile : Crack :: Pliable : ?

- (1) Bear
- (2) Bend
- (3) Reduce
- (4) Touch

Options

1. 1
2. 2
3. 3
4. 4

Question Type : **MCQ**
 Question ID : **4795482000**
 Option 1 ID : **4795487941**
 Option 2 ID : **4795487942**
 Option 3 ID : **4795487943**
 Option 4 ID : **4795487944**
 Status : **Answered**
 Chosen Option : **2**

Q.3 A person 'X' start from his home and went 3 km straight. Then he turned towards his right and went 2 km. He turned again towards his right and went 1 km. If he is in North-West from his house, then in which direction he went in the beginning ?

- (1) South
- (2) East
- (3) West
- (4) South-East

Options 1. 1
2. 2
3. 3
4. 4

Question Type : **MCQ**

Question ID : **4795481993**

Option 1 ID : **4795487913**

Option 2 ID : **4795487914**

Option 3 ID : **4795487915**

Option 4 ID : **4795487916**

Status : **Answered**

Chosen Option : **3**

<https://t.me/UPDATXAMS>

Q.4 Which letter will be exactly at the middle if all the letters of the word 'INDISPENSIBLE' are reversed, and the vowels are replaced by the previous letter and consonants are replaced by the next letter of the English Alphabet ?

- (1) D
- (2) O
- (3) Q
- (4) F

Options 1. 1
2. 2
3. 3
4. 4

Question Type : **MCQ**

Question ID : **4795481978**

Option 1 ID : **4795487853**

Option 2 ID : **4795487854**

Option 3 ID : **4795487855**

Option 4 ID : **4795487856**

Status : **Answered**

Chosen Option : **1**

Q.5 If JANUARY = 718

FEBRUARY = 8210

SEPTEMBER = 9918

in a certain code language, then NOVEMBER = ?

(1) 81018

(2) 81119

(3) 91019

(4) 81220

Options

1. 1

2. 2

3. 3

4. 4

Question Type : **MCQ**

Question ID : **4795481997**

Option 1 ID : **4795487929**

Option 2 ID : **4795487930**

Option 3 ID : **4795487931**

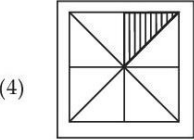
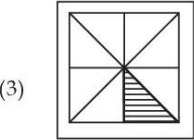
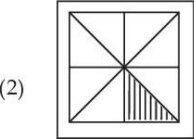
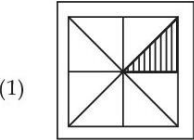

Option 4 ID : **4795487932**

Status : **Not Answered**

Chosen Option : --



Q.6 The first two figures are related in a certain way. Choose the correct option to replace the question mark '(?)' which has the similar relation with the third figure.



- Options**
- 1. 1
 - 2. 2
 - 3. 3
 - 4. 4

Question Type : **MCQ**
Question ID : **4795481987**
Option 1 ID : **4795487889**
Option 2 ID : **4795487890**
Option 3 ID : **4795487891**
Option 4 ID : **4795487892**
Status : **Answered**
Chosen Option : 1

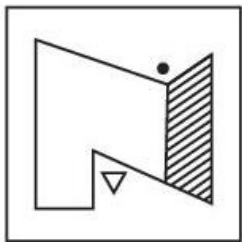
Q.7 A lady introduced a boy as the son of the daughter of the father of her husband. How is the lady related to that boy ?

- (1) Sister
- (2) Sister-in-Law
- (3) Aunt
- (4) Grandmother

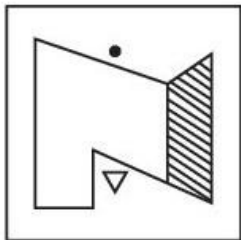
- Options**
- 1. 1
 - 2. 2
 - 3. 3
 - 4. 4

Question Type : **MCQ**
Question ID : **4795481996**
Option 1 ID : **4795487925**
Option 2 ID : **4795487926**
Option 3 ID : **4795487927**
Option 4 ID : **4795487928**
Status : **Answered**
Chosen Option : 3

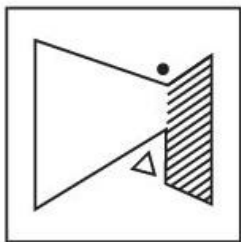
Q.8 Choose the correct mirror image of the following figure.



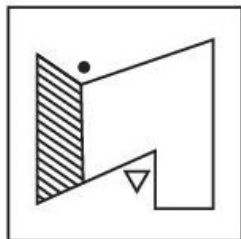
(1)




(2)



(3)



(4)



- Options 1. 1
2. 2
3. 3
4. 4

Question Type : MCQ
Question ID : 4795481984
Option 1 ID : 4795487877
Option 2 ID : 4795487878
Option 3 ID : 4795487879
Option 4 ID : 4795487880
Status : Answered
Chosen Option : 3

Q.9 In a code language 'SHE WON GOLD MEDAL' is written as JRP VMT QMNZ KPZFN then how will you write 'DOME' in this language ?

- (1) ZMPK
- (2) ZKMP
- (3) ZMKP
- (4) ZPMK

Options 1. 1
2. 2
3. 3
4. 4

Question Type : **MCQ**
Question ID : **4795481983**
Option 1 ID : **4795487873**
Option 2 ID : **4795487874**
Option 3 ID : **4795487875**
Option 4 ID : **4795487876**
Status : **Answered**
Chosen Option : **3**

Q.10 Choose the word from the given options which can not be formed by using the letters of the given word.

KALEIDOSCOPE

- (1) DIESEL
- (2) PACKED
- (3) SCALE
- (4) LOCKER

Options 1. 1
2. 2
3. 3
4. 4

Question Type : **MCQ**
Question ID : **4795481995**
Option 1 ID : **4795487921**
Option 2 ID : **4795487922**
Option 3 ID : **4795487923**
Option 4 ID : **4795487924**
Status : **Answered**
Chosen Option : **4**

Q.11 If A stands for division, B stands for addition, C stands for subtraction and D stands for multiplication, then which of the following alternatives is correct ?

- (1) 20 B 8 A 4 C 2 D 1 = 24
- (2) 20 A 4 B 6 C 2 D 1 = 12
- (3) 8 B 20 A 4 C 1 D 2 = 11
- (4) 4 B 20 A 2 C 8 D 1 = 8

- Options**
- 1. 1
 - 2. 2
 - 3. 3
 - 4. 4

Question Type : **MCQ**
Question ID : **4795481979**
Option 1 ID : **4795487857**
Option 2 ID : **4795487858**
Option 3 ID : **4795487859**
Option 4 ID : **4795487860**
Status : **Answered**
Chosen Option : **3**

Q.12 Find the missing numbers. Choose the correct option.

I

+

III

||

36

×

×

-

||

39

II

=

57

IV

=

4

- (1) I = 3, II = 19, III = 3, IV = 13
- (2) I = 19, II = 3, III = 13, IV = 17
- (3) I = 19, II = 3, III = 17, IV = 13
- (4) I = 3, II = 19, III = 13, IV = 17

- Options**
- 1. 1
 - 2. 2
 - 3. 3
 - 4. 4

Question Type : **MCQ**
Question ID : **4795481982**
Option 1 ID : **4795487869**
Option 2 ID : **4795487870**
Option 3 ID : **4795487871**
Option 4 ID : **4795487872**
Status : **Answered**
Chosen Option : **3**

- Q.13** W, X, Y and Z are distinct individuals. W is the daughter of X. X is the son of Y. Y is the father of Z. Which of the following statement is definitely wrong ?
- (1) W is the granddaughter of Y
 - (2) X and Z are brothers
 - (3) Z is the father of W
 - (4) W is the niece of Z

Options 1. 1
2. 2
3. 3
4. 4

Question Type : **MCQ**
Question ID : **4795481992**
Option 1 ID : **4795487909**
Option 2 ID : **4795487910**
Option 3 ID : **4795487911**
Option 4 ID : **4795487912**
Status : **Answered**
Chosen Option : 3

- Q.14** Choose the correct option to replace (?) question mark in the following figural series.



- (1)
- (2)
- (3)
- (4)

Options 1. 1
2. 2
3. 3
4. 4

Question Type : **MCQ**
Question ID : **4795481988**
Option 1 ID : **4795487893**
Option 2 ID : **4795487894**
Option 3 ID : **4795487895**
Option 4 ID : **4795487896**
Status : **Answered**
Chosen Option : 3

Q.15 Choose the correct option to complete the following series :

aab_dabcd__bccda_bcda_bcd

- (1) dbaca
- (2) cdaba
- (3) acdba
- (4) bcadb

Options 1. 1
2. 2
3. 3
4. 4

Question Type : **MCQ**
Question ID : **4795481981**
Option 1 ID : **4795487865**
Option 2 ID : **4795487866**
Option 3 ID : **4795487867**
Option 4 ID : **4795487868**
Status : **Answered**
Chosen Option : **2**

Q.16 If all the digits in each of the following numbers are arranged in descending order within the number, then which of the following will be the highest number ?

674, 523, 382, 426, 578

- (1) 674
- (2) 578
- (3) 382
- (4) 426

Options 1. 1
2. 2
3. 3
4. 4

Question Type : **MCQ**
Question ID : **4795481990**
Option 1 ID : **4795487901**
Option 2 ID : **4795487902**
Option 3 ID : **4795487903**
Option 4 ID : **4795487904**
Status : **Answered**
Chosen Option : **2**

Q.17 There are seven sports coaches A, B, C, D, E, F and G for training in seven sports Cricket, Hockey, Football, Volleyball, Chess, Badminton and Skating from Monday to Friday at sports club. Each coach trains a different sports and not more than two sports are being trained on any one of the days. Volleyball is trained by coach B on Tuesday. Coach D trains on Friday but neither Hockey nor Football. coach F trains cricket but neither on Thursday nor on Friday. Coach A trains in skating on the day on which cricket is trained. Coach C trains Chess on Monday. Hockey and Volleyball are trained on the same day. Coach G trains on Thursday. On which of the following days skating is trained ?

- (1) Tuesday
- (2) Wednesday
- (3) Monday
- (4) Thursday

Options 1. 1
2. 2
3. 3
4. 4

Question Type : **MCQ**
Question ID : **4795481980**
Option 1 ID : **4795487861**
Option 2 ID : **4795487862**
Option 3 ID : **4795487863**
Option 4 ID : **4795487864**
Status : **Answered**
Chosen Option : 2

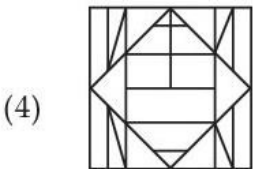

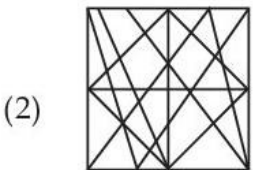
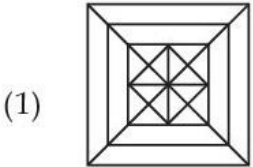
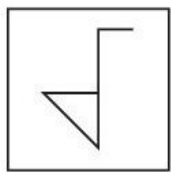
Q.18 You are the chairman of election committee and you are currently conducting the elections. You came to know that an issue has raised in a voting booth after the Completion of elections. What will be your action regarding that election ?

- (1) You will ask to cancel the election in that seat and provide the seat to the existing person on that seat.
- (2) You will ignore this information and will announce the result as if nothing has happened.
- (3) You will ask for revoting in that booth where the problem was observed and then declare the result.
- (4) You will declare the result by not considering any vote from that booth where an issue has arisen.

Options 1. 1
2. 2
3. 3
4. 4

Question Type : **MCQ**
Question ID : **4795481976**
Option 1 ID : **4795487845**
Option 2 ID : **4795487846**
Option 3 ID : **4795487847**
Option 4 ID : **4795487848**
Status : **Answered**
Chosen Option : 3

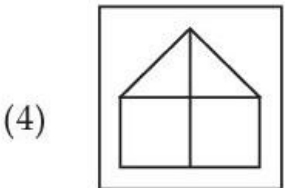
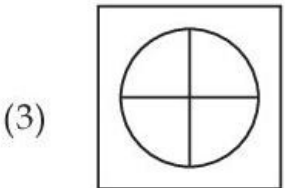
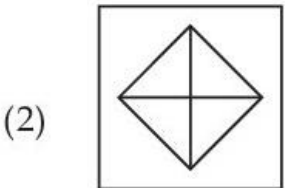
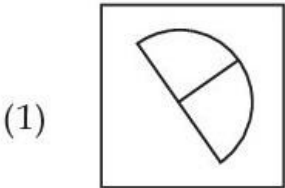
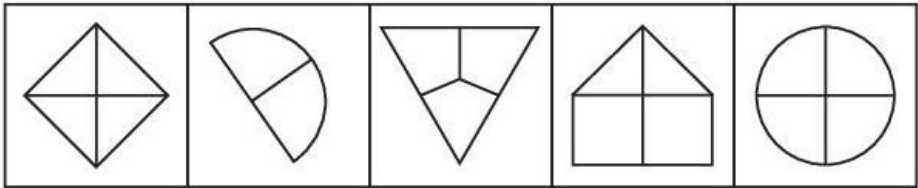
Q.19 Choose the correct option in which the given figure is embedded.



- Options
- 1. 1
 - 2. 2
 - 3. 3
 - 4. 4

Question Type : **MCQ**
Question ID : **4795481985**
Option 1 ID : **4795487881**
Option 2 ID : **4795487882**
Option 3 ID : **4795487883**
Option 4 ID : **4795487884**
Status : **Not Answered**
Chosen Option : --

Q.20 Find the odd figure out from the following :



- Options 1. 1
2. 2
3. 3
4. 4

Question Type : MCQ
Question ID : 4795481986
Option 1 ID : 4795487885
Option 2 ID : 4795487886
Option 3 ID : 4795487887
Option 4 ID : 4795487888
Status : Answered
Chosen Option : 1

Q.21 Find the missing term in the following :

VMI, TKF, QGC, MEZ, ___?

- (1) HAX
- (2) HAT
- (3) HAW
- (4) HBW

Options 1. 1
2. 2
3. 3
4. 4

Question Type : **MCQ**
Question ID : 4795481998
Option 1 ID : 4795487933
Option 2 ID : 4795487934
Option 3 ID : 4795487935
Option 4 ID : 4795487936
Status : **Answered**
Chosen Option : 3

Q.22 Find the missing term in the following number series :

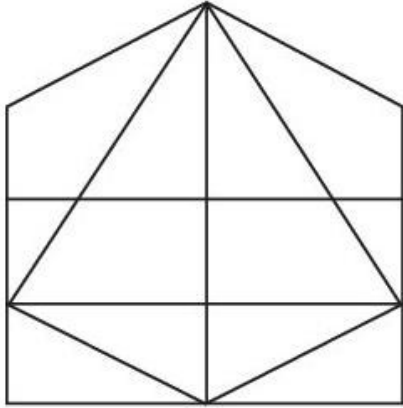
6, 12, 18, 36, 54, 108, ___?

- (1) 216
- (2) 148
- (3) 162
- (4) 154

Options 1. 1
2. 2
3. 3
4. 4

Question Type : **MCQ**
Question ID : 4795482001
Option 1 ID : 4795487945
Option 2 ID : 4795487946
Option 3 ID : 4795487947
Option 4 ID : 4795487948
Status : **Answered**
Chosen Option : 3

Q.23 Find the number of triangles in the following figure :



- (1) 13
- (2) 15
- (3) 17
- (4) 18

Options 1. 1

2. 2

3. 3

4. 4

Question Type : MCQ

Question ID : 4795481994

Option 1 ID : 4795487917

Option 2 ID : 4795487918

Option 3 ID : 4795487919

Option 4 ID : 4795487920

Status : Answered

Chosen Option : 1



Q.24 Fungi is related to Mycology as Algae is related to ____?

- (1) Phychology
- (2) Palaeontology
- (3) Concology
- (4) Craniology

Options 1. 1
2. 2
3. 3
4. 4

Question Type : **MCQ**
Question ID : **4795481999**
Option 1 ID : **4795487937**
Option 2 ID : **4795487938**
Option 3 ID : **4795487939**
Option 4 ID : **4795487940**
Status : **Answered**
Chosen Option : 3

Q.25 In the following question, a statement is followed by two conclusions, assuming everything in the statement is true, decide which of them logically follow(s) from the information given in the statement.

Statement : Dilemma in decision making brings frustration. Reaching a meaningful decision resolves the tension and improves mental health.

Conclusion : (I) Resolving dilemma makes a person strong and powerful.
(II) Dilemma results into mental tension.

- (1) Only (I) follows
- (2) Only (II) follows
- (3) Both (I) and (II) follows
- (4) Neither (I) nor (II) follows

Options 1. 1
2. 2
3. 3
4. 4

Question Type : **MCQ**
Question ID : **4795481977**
Option 1 ID : **4795487849**
Option 2 ID : **4795487850**
Option 3 ID : **4795487851**
Option 4 ID : **4795487852**
Status : **Answered**
Chosen Option : 1

Q.26 A fires 5 shots to B's 3 but A kills only once in 3 shots while B kills once in 2 shots. When B has missed 27 times, A has killed :

- (1) 60 birds
- (2) 72 birds
- (3) 30 birds
- (4) 80 birds

Options 1. 1
2. 2
3. 3
4. 4

Question Type : **MCQ**
Question ID : **4795482003**
Option 1 ID : **4795487953**
Option 2 ID : **4795487954**
Option 3 ID : **4795487955**
Option 4 ID : **4795487956**
Status : **Answered**
Chosen Option : **3**

Q.27 Two statements are given below. Decide whether the data provided in the statements is sufficient to answer the question :

How many Lectures were delivered in two days workshop in a College ?

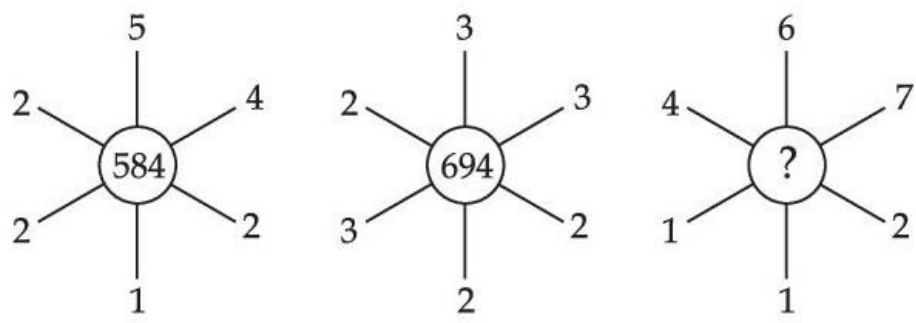
Statement (I) : Nine Speakers were invited to give at least one lecture each out of which one third of the speakers could not come.
Statement (II) : Half of the attended speakers gave two lectures each.

- (1) The data in statement (I) alone is sufficient to answer the question while the data in statement (II) alone is not sufficient to answer the question.
- (2) The data either in statement (I) or in (II) alone are sufficient to answer the question.
- (3) The data in both statements (I) and (II) together is not sufficient to answer the question.
- (4) The data in both statements (I) and (II) together are necessary to answer the question.

Options 1. 1
2. 2
3. 3
4. 4

Question Type : **MCQ**
Question ID : **4795481989**
Option 1 ID : **4795487897**
Option 2 ID : **4795487898**
Option 3 ID : **4795487899**
Option 4 ID : **4795487900**
Status : **Answered**
Chosen Option : **4**

Q.28 Find the missing term in the given pattern :



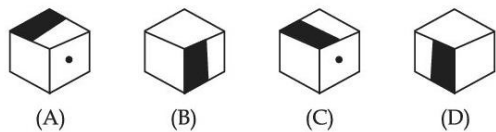
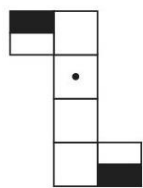
- (1) 769
- (2) 678
- (3) 937
- (4) 824

Options 1. 1
2. 2
3. 3
4. 4

Question Type : MCQ
Question ID : 4795482002
Option 1 ID : 4795487949
Option 2 ID : 4795487950
Option 3 ID : 4795487951
Option 4 ID : 4795487952
Status : Answered
Chosen Option : 2



Q.29 Choose the correct option of boxes which can be formed from the sheet of paper given in the figure.

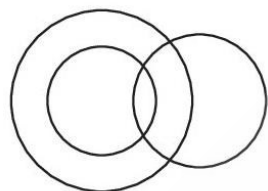


- (1) (B) and (C) only
- (2) (A), (B) and (D) only
- (3) (A) and (B) only
- (4) (A), (B), (C) and (D)

Options 1. 1
2. 2
3. 3
4. 4

Question Type : **MCQ**
Question ID : **4795481975**
Option 1 ID : **4795487841**
Option 2 ID : **4795487842**
Option 3 ID : **4795487843**
Option 4 ID : **4795487844**
Status : **Not Answered**
Chosen Option : --

Q.30 Based on the venn diagram, select the correct classes among the following alternatives :



- (1) Engineers, Human Beings, Rats
- (2) Females, Mothers, Doctors
- (3) Males, Fathers, Family
- (4) Professor, Author, Children

Options 1. 1
2. 2
3. 3
4. 4

Question Type : **MCQ**
Question ID : **4795482004**
Option 1 ID : **4795487957**
Option 2 ID : **4795487958**
Option 3 ID : **4795487959**
Option 4 ID : **4795487960**
Status : **Answered**
Chosen Option : **2**

Section : **General Knowledge/ General Awareness**

Q.1

It occurs when the full moon is at the closest point of its orbit to the Earth which makes the moon look extra-close, upto 14% bigger and 30% brighter than a full moon at its farthest point from Earth. What is this phenomenon called ?

(1) Lunar Eclipse

(2) Super Moon

(3) Blood Moon

(4) Blue moon

Options

1. 1

2. 2

3. 3

4. 4

Question Type : **MCQ**

Question ID : **4795482034**

Option 1 ID : **4795488077**

Option 2 ID : **4795488078**

Option 3 ID : **4795488079**

Option 4 ID : **4795488080**

Status : **Answered**

Chosen Option : **1**

Q.2

Which one among the following processes is not related to the evolution of the present composition of the Earth's atmosphere ?

(1) Differentiation

(2) Solar winds

(3) Degassing

(4) Photosynthesis

Options

1. 1

2. 2

3. 3

4. 4

Question Type : **MCQ**

Question ID : **4795482018**

Option 1 ID : **4795488013**

Option 2 ID : **4795488014**

Option 3 ID : **4795488015**

Option 4 ID : **4795488016**

Status : **Answered**

Chosen Option : **1**

Q.3 When was the National Human Rights Commission (NHRC) established in India ?

- (1) 1992
- (2) 1993
- (3) 1994
- (4) 1996

Options 1. 1

- 2. 2
- 3. 3
- 4. 4

Question Type : **MCQ**

Question ID : **4795482022**

Option 1 ID : **4795488029**

Option 2 ID : **4795488030**

Option 3 ID : **4795488031**

Option 4 ID : **4795488032**

Status : **Answered**

Chosen Option : **1**

Q.4 Brass is an alloy of :

- (1) Cu and Sn
- (2) Zn and Sn
- (3) Cu and Zn
- (4) Sn and Ni

Options 1. 1

- 2. 2
- 3. 3
- 4. 4

Question Type : **MCQ**

Question ID : **4795482032**

Option 1 ID : **4795488069**

Option 2 ID : **4795488070**

Option 3 ID : **4795488071**

Option 4 ID : **4795488072**

Status : **Answered**

Chosen Option : **3**



Q.5 Who was the first Director of the National School of Drama ?

- (1) B.V. Karanth
- (2) Ebrahim Alkazi
- (3) Ratan Thiyam
- (4) Ram Gopal Bajaj

Options 1. 1
2. 2
3. 3
4. 4

Question Type : **MCQ**
Question ID : **4795482014**
Option 1 ID : **4795487997**
Option 2 ID : **4795487998**
Option 3 ID : **4795487999**
Option 4 ID : **4795488000**
Status : **Answered**
Chosen Option : **2**

Q.6 What is the Central Bank of India called ?

- (1) State Bank of India
- (2) Reserve Bank of India
- (3) Bank of india
- (4) Union Bank of India

Options 1. 1
2. 2
3. 3
4. 4

Question Type : **MCQ**
Question ID : **4795482009**
Option 1 ID : **4795487977**
Option 2 ID : **4795487978**
Option 3 ID : **4795487979**
Option 4 ID : **4795487980**
Status : **Answered**
Chosen Option : **2**

Q.7 'Puddvem' in Goa refers to ?

(A) A traditional dress worn by women.

(B) A traditional dress worn by men.

Choose the correct answer from the options given below :

(1) (A) only

(2) (B) only

(3) (A) and (B) both

(4) Neither (A) nor (B)

Options 1. 1

2. 2

3. 3

4. 4

Question Type : **MCQ**

Question ID : **4795482012**

Option 1 ID : **4795487989**

Option 2 ID : **4795487990**

Option 3 ID : **4795487991**

Option 4 ID : **4795487992**

Status : **Answered**

Chosen Option : 1

Q.8 Identify the correct statements from the following :

(A) Babur defeated Ibrahim Lodi in the First Battle of Panipat in the year 1526.

(B) Marathas defeated Ahmed Shah Abdali in the Third Battle of Panipat in the year 1761.

(C) Rana Sanga defeated Babur in the Battle of Khanva in the year 1527.

(D) Sher Shah defeated Humayun in the Battle of Chauri Chaura in the year 1539.

Select the correct answer from the codes given below :

(1) (B) and (C) only

(2) (B), (C) and (D) only

(3) (A) and (C) only

(4) (A) and (D) only

Options 1. 1

2. 2

3. 3

4. 4

Question Type : **MCQ**

Question ID : **4795482007**

Option 1 ID : **4795487969**

Option 2 ID : **4795487970**

Option 3 ID : **4795487971**

Option 4 ID : **4795487972**

Status : **Answered**

Chosen Option : 4

Q.9 Who is the recipient of the Sahitya Akademi Award 2022 for Hindi ?

- (1) Badri Narayan
- (2) Anamika
- (3) Veena Gupta
- (4) Mridula Garg

Options 1. 1
2. 2
3. 3
4. 4

Question Type : **MCQ**
Question ID : **4795482024**
Option 1 ID : **4795488037**
Option 2 ID : **4795488038**
Option 3 ID : **4795488039**
Option 4 ID : **4795488040**
Status : **Answered**
Chosen Option : 1

Q.10 Which of the following Padma Bhushan awardee/awardees is/are wrongly matched with his/her/their field ?

- (A) Smt. Sudha Murthy - Social Work
- (B) Shri Kamlesh D. Patel - Spiritualism
- (C) Shri Deepak Dhar - Art
- (D) Shri Kapil Kapoor - Science and Engineering

Choose the correct answer from the options given below :

- (1) (B) only
- (2) (C) and (D) only
- (3) (A) only
- (4) (B) and (C) only

Options 1. 1
2. 2
3. 3
4. 4

Question Type : **MCQ**
Question ID : **4795482025**
Option 1 ID : **4795488041**
Option 2 ID : **4795488042**
Option 3 ID : **4795488043**
Option 4 ID : **4795488044**
Status : **Answered**
Chosen Option : 4

Q.11 Which amongst the following statements is correct with respect to the NITI AAYOG ?

- (A) Its Vice-President is appointed by the President of India.
- (B) All the Union Ministers are its Ex-officio Members.

Select the correct answer from the options given below :

- (1) (A) only
- (2) (B) only
- (3) Both (A) and (B)
- (4) Neither (A) nor (B)

Options 1. 1
2. 2
3. 3
4. 4

Question Type : **MCQ**
Question ID : **4795482028**
Option 1 ID : **4795488053**
Option 2 ID : **4795488054**
Option 3 ID : **4795488055**
Option 4 ID : **4795488056**
Status : **Answered**
Chosen Option : 4

Q.12 Who among the following became the world's first woman Prime Minister ?

- (1) Indira Gandhi
- (2) Sirimavo Bandarnaike
- (3) Sheikh Hasina
- (4) Margaret Thatcher

Options 1. 1
2. 2
3. 3
4. 4

Question Type : **MCQ**
Question ID : **4795482005**
Option 1 ID : **4795487961**
Option 2 ID : **4795487962**
Option 3 ID : **4795487963**
Option 4 ID : **4795487964**
Status : **Answered**
Chosen Option : 2



Q.13 Match List - I with List - II correctly.

List - I	List - II
Person	Office (Current/Former)
(A) Tushar Mehta	(I) UGC
(B) Manoj Soni	(II) Solicitor General of India
(C) S. Somanath	(III) UPSC
(D) M. Jagdish Kumar	(IV) ISRO

Select the correct answer using the code given below :

- (1) (A)-(II), (B)-(III), (C)-(IV), (D)-(I)
- (2) (A)-(III), (B)-(II), (C)-(I), (D)-(IV)
- (3) (A)-(II), (B)-(I), (C)-(III), (D)-(IV)
- (4) (A)-(III), (B)-(IV), (C)-(II), (D)-(I)

- Options
- 1. 1
 - 2. 2
 - 3. 3
 - 4. 4

Question Type : MCQ

Question ID : 4795482019

Option 1 ID : 4795488017

Option 2 ID : 4795488018

Option 3 ID : 4795488019

Option 4 ID : 4795488020

Status : Answered

Chosen Option : 1



Q.14 Which is **not true** for a non-metal ?

- (1) Non-metals are brittle.
- (2) Non-metals have low tensile strength.
- (3) Non-metals are lustrous.
- (4) Non-metals are insulators.

Options 1. 1

2. 2

3. 3

4. 4

Question Type : **MCQ**

Question ID : **4795482030**

Option 1 ID : **4795488061**

Option 2 ID : **4795488062**

Option 3 ID : **4795488063**

Option 4 ID : **4795488064**

Status : **Answered**

Chosen Option : 4

Q.15 Which country won the FIH Men's Hockey World Cup 2023 held in Odisha ?

- (1) Australia
- (2) Belgium
- (3) India
- (4) Germany

Options 1. 1

2. 2

3. 3

4. 4

Question Type : **MCQ**

Question ID : **4795482027**

Option 1 ID : **4795488049**

Option 2 ID : **4795488050**

Option 3 ID : **4795488051**

Option 4 ID : **4795488052**

Status : **Answered**

Chosen Option : 4

Q.16 Which one of the following Padma Vibhushan awardee is correctly matched with his/her field ?

- (1) Shri Zakir Hussain - Medicine
- (2) Shri Srinivas Vardhan - Science and Engineering
- (3) Shri Balkrishna Doshi - Art
- (4) Shri Dilip Mahalanabis - Architecture

- Options**
- 1. 1
 - 2. 2
 - 3. 3
 - 4. 4

Question Type : **MCQ**
Question ID : **4795482026**
Option 1 ID : **4795488045**
Option 2 ID : **4795488046**
Option 3 ID : **4795488047**
Option 4 ID : **4795488048**
Status : **Answered**
Chosen Option : **2**

Q.17 Which among the following statements is/are correct ?

- (A) Finance Commission has been constituted under the provision of Articles in the Constitution of India.
- (B) Election Commission has been constituted under the provision of Articles in the Constitution of India.

Choose the correct answer from the options given below :

- (1) (A) only
- (2) (B) only
- (3) Both (A) and (B)
- (4) Neither (A) nor (B)

- Options**
- 1. 1
 - 2. 2
 - 3. 3
 - 4. 4

Question Type : **MCQ**
Question ID : **4795482020**
Option 1 ID : **4795488021**
Option 2 ID : **4795488022**
Option 3 ID : **4795488023**
Option 4 ID : **4795488024**
Status : **Answered**
Chosen Option : **3**

Q.18 During the total lunar eclipse, the Earth fully blocks direct sunlight from reaching the Moon. The only light reflected from the lunar surface has been refracted by the Earth's atmosphere. Due to this colour, it is called :

- (A) Blue Moon
- (B) Blood Moon

Choose the correct answer from the options given below :

- (1) (A) only
- (2) (B) only
- (3) Both (A) and (B)
- (4) Neither (A) nor (B)

Options 1. 1

2. 2

3. 3

4. 4

Question Type : **MCQ**

Question ID : **4795482033**

Option 1 ID : **4795488073**

Option 2 ID : **4795488074**

Option 3 ID : **4795488075**

Option 4 ID : **4795488076**

Status : **Answered**

Chosen Option : **2**

Q.19 Which of the following is an iron ore ?

- (1) Bauxite
- (2) Cryolite
- (3) Feldspar
- (4) Limonite

Options 1. 1

2. 2

3. 3

4. 4

Question Type : **MCQ**

Question ID : **4795482031**

Option 1 ID : **4795488065**

Option 2 ID : **4795488066**

Option 3 ID : **4795488067**

Option 4 ID : **4795488068**

Status : **Answered**

Chosen Option : **3**

Q.20 Which form of classical dance is also known as Daasiyattam ?

- (1) Bharatnatyam
- (2) Mohiniyattam
- (3) Kuchipudi
- (4) Kathakali

Options 1. 1
2. 2
3. 3
4. 4

Question Type : **MCQ**
Question ID : **4795482013**
Option 1 ID : **4795487993**
Option 2 ID : **4795487994**
Option 3 ID : **4795487995**
Option 4 ID : **4795487996**
Status : **Answered**
Chosen Option : 2

Q.21 The term “geography” was first coined by which one of the following scholars ?

- (1) Aristotle
- (2) Socrates
- (3) Eratosthenese
- (4) Herodotus

Options 1. 1
2. 2
3. 3
4. 4

Question Type : **MCQ**
Question ID : **4795482016**
Option 1 ID : **4795488005**
Option 2 ID : **4795488006**
Option 3 ID : **4795488007**
Option 4 ID : **4795488008**
Status : **Answered**
Chosen Option : 3



Q.22 India holds the Presidency of the G 20 for which of the following periods ?

- (1) 1 January 2023 to 31 December 2023
- (2) 1 December 2022 to 30 November 2023
- (3) 31 December 2022 to 30 December 2023
- (4) 31 January 2023 to 30 January 2024

Options 1. 1

2. 2

3. 3

4. 4

Question Type : **MCQ**

Question ID : **4795482021**

Option 1 ID : **4795488025**

Option 2 ID : **4795488026**

Option 3 ID : **4795488027**

Option 4 ID : **4795488028**

Status : **Answered**

Chosen Option : **2**

Q.23 What does 'Phanek' in Manipur refer to ?

- (A) A handwoven cloth wrapped around the waist like a skirt.
- (B) An exquisitely woven shawl used to wrap the upper body.

Choose the correct answer from the options given below :

- (1) (A) only
- (2) (B) only
- (3) (A) and (B) both
- (4) Neither (A) nor (B)

Options 1. 1

2. 2

3. 3

4. 4

Question Type : **MCQ**

Question ID : **4795482011**

Option 1 ID : **4795487985**

Option 2 ID : **4795487986**

Option 3 ID : **4795487987**

Option 4 ID : **4795487988**

Status : **Not Answered**

Chosen Option : **--**

Q.24 List - I contains some of the historical events and List - II contains their respective year of occurrence. Match List-I with the items of List-II.

List - I	List - II
(A) Wright Brothers invent the Aeroplane	(I) 1903
(B) Fidel Castro comes to power after the Cuban Revolution	(II) 1776
(C) US Declaration of Independence	(III) 1970
(D) Tonga and Fiji gain Independence from Britain	(IV) 1958

Select the correct answer from the codes given below :

- (1) (A)-(I), (B)-(III), (C)-(II), (D)-(IV)
- (2) (A)-(III), (B)-(II), (C)-(IV), (D)-(I)
- (3) (A)-(IV), (B)-(III), (C)-(II), (D)-(I)
- (4) (A)-(I), (B)-(IV), (C)-(II), (D)-(III)

- Options**
- 1. 1
 - 2. 2
 - 3. 3
 - 4. 4

Question Type : **MCQ**

Question ID : **4795482008**

Option 1 ID : **4795487973**

Option 2 ID : **4795487974**

Option 3 ID : **4795487975**

Option 4 ID : **4795487976**

Status : **Answered**

Chosen Option : **1**

Q.25 Which among the following statements about money creation and Banking System are NOT correct ?

- (A) Assets are things a firm can claim from others.
- (B) In case of a bank, loans given to public are not assets.
- (C) Liabilities for any firm are its debts or what it owes to others.
- (D) For a Bank, the main liability is the deposits which people keep with it.

Choose the correct answer from the options below :

- (1) (A), (B) and (C) only
- (2) (A), (C) and (D) only
- (3) (A), (B) and (D) only
- (4) (B), (C) and (D) only

- Options**
- 1. 1
 - 2. 2
 - 3. 3
 - 4. 4

Question Type : **MCQ**

Question ID : **4795482010**

Option 1 ID : **4795487981**

Option 2 ID : **4795487982**

Option 3 ID : **4795487983**

Option 4 ID : **4795487984**

Status : **Answered**

Chosen Option : **3**

Q.26 Which Article of Part XVII - LANGUAGE, of the Constitution of India authorizes the President of India to proclaim the use of Hindi language as official language in addition to the English language for any of the official purposes of the Union ?

- (1) 344
- (2) 343
- (3) 342
- (4) 345

Options 1. 1
2. 2
3. 3
4. 4

Question Type : **MCQ**
Question ID : **4795482023**
Option 1 ID : **4795488033**
Option 2 ID : **4795488034**
Option 3 ID : **4795488035**
Option 4 ID : **4795488036**
Status : **Answered**
Chosen Option : **4**

Q.27 In which year was Sikkim included as a State in the Union of India ?

- (1) 1970
- (2) 1975
- (3) 1978
- (4) 1980

Options 1. 1
2. 2
3. 3
4. 4

Question Type : **MCQ**
Question ID : **4795482029**
Option 1 ID : **4795488057**
Option 2 ID : **4795488058**
Option 3 ID : **4795488059**
Option 4 ID : **4795488060**
Status : **Answered**
Chosen Option : **1**

Q.28 Who among the following wrote the popular song of Assam 'O mor Apunar Desh' (O'my beloved land) ?

- (1) Ashutosh Goswami
- (2) Prafulla Mohanta
- (3) Lakshminath Bezbaruah
- (4) Bhupen Hazarika

Options 1. 1

2. 2

3. 3

4. 4

Question Type : **MCQ**

Question ID : **4795482006**

Option 1 ID : **4795487965**

Option 2 ID : **4795487966**

Option 3 ID : **4795487967**

Option 4 ID : **4795487968**

Status : **Not Answered**

Chosen Option : --

Q.29 Physical geography includes the study of which of the following ?

- (A) Lithosphere
- (B) Atmosphere
- (C) Troposphere
- (D) Biosphere

Choose the correct answer from the options below :

- (1) (A), (B) and (C) only
- (2) (A), (C) and (D) only
- (3) (B), (C) and (D) only
- (4) (A), (B) and (D) only

Options 1. 1

2. 2

3. 3

4. 4

Question Type : **MCQ**

Question ID : **4795482017**

Option 1 ID : **4795488009**

Option 2 ID : **4795488010**

Option 3 ID : **4795488011**

Option 4 ID : **4795488012**

Status : **Answered**

Chosen Option : **2**



Q.30 Which among the following are branches of Human Geography, based on the systematic approach ?

- (A) Population and settlement geography
- (B) Political geography
- (C) Historical geography
- (D) Regional geography

Choose the correct answer from the options below :

- (1) (A), (B) and (C) only
- (2) (A), (C) and (D) only
- (3) (A), (B) and (D) only
- (4) (B), (C) and (D) only

Options 1. 1

2. 2

3. 3

4. 4

Question Type : **MCQ**

Question ID : **4795482015**

Option 1 ID : **4795488001**

Option 2 ID : **4795488002**

Option 3 ID : **4795488003**

Option 4 ID : **4795488004**

Status : **Answered**

Chosen Option : **2**

Section : **Quantitative Ability**



Q.1

The multiplicative inverse of $-2\frac{3}{5}$ is :

(1) $-\frac{5}{13}$

(2) $-\frac{7}{5}$

(3) $-\frac{5}{7}$

(4) $\frac{13}{5}$

Options

1. 1

2. 2

3. 3

4. 4

Question Type : **MCQ**

Question ID : **4795482064**

Option 1 ID : **4795488197**

Option 2 ID : **4795488198**

Option 3 ID : **4795488199**

Option 4 ID : **4795488200**

Status : **Answered**

Chosen Option : 1



Q.2

$$2 - \frac{1}{1+\sqrt{3}} + \frac{1}{1-\sqrt{3}} =$$

(1) $2 - \sqrt{3}$

(2) 2

(3) $-\sqrt{3}$

(4) $2\sqrt{3}$

Options

1. 1
2. 2
3. 3
4. 4

Question Type : MCQ

Question ID : 4795482062

Option 1 ID : 4795488189

Option 2 ID : 4795488190

Option 3 ID : 4795488191

Option 4 ID : 4795488192

Status : Answered

Chosen Option : 2

Q.3

Aditya and Varun can do a work in 10 days and 15 days respectively. They started working together, but Aditya left the work 5 days before its completion. In how many days the work get completed ?

- (1) 8
- (2) 9
- (3) 10
- (4) 12

Options

1. 1
2. 2
3. 3
4. 4

Question Type : MCQ

Question ID : 4795482037

Option 1 ID : 4795488089

Option 2 ID : 4795488090

Option 3 ID : 4795488091

Option 4 ID : 4795488092

Status : Answered

Chosen Option : 2

Q.4 The marked price of an article is ₹ 2000 more than its cost price. When discount is ₹ 800, a profit of 25% is obtained. At what price should the article be sold to obtain 30% profit ?

- (1) ₹ 6000
- (2) ₹ 6240
- (3) ₹ 6520
- (4) ₹ 6400

Options 1. 1
2. 2
3. 3
4. 4

Question Type : **MCQ**
Question ID : **4795482042**
Option 1 ID : **4795488109**
Option 2 ID : **4795488110**
Option 3 ID : **4795488111**
Option 4 ID : **4795488112**
Status : **Answered**
Chosen Option : **2**

Q.5 In a school having 800 students, the average age of boys is 13 years and that of the girls is 11 years. If the average age of all the students in the school is 11 years 9 months, then the number of girls in the school is :

- (1) 250
- (2) 300
- (3) 350
- (4) 500

Options 1. 1
2. 2
3. 3
4. 4

Question Type : **MCQ**
Question ID : **4795482039**
Option 1 ID : **4795488097**
Option 2 ID : **4795488098**
Option 3 ID : **4795488099**
Option 4 ID : **4795488100**
Status : **Answered**
Chosen Option : **4**



Q.6 The price of sugar is reduced by 10%. How many kilograms of sugar can now be bought for the money which was sufficient to buy 45 kg of sugar earlier ?

- (1) 52
- (2) 50
- (3) 48
- (4) 49

Options 1. 1

- 2. 2
- 3. 3
- 4. 4

Question Type : **MCQ**

Question ID : **4795482052**

Option 1 ID : **4795488149**

Option 2 ID : **4795488150**

Option 3 ID : **4795488151**

Option 4 ID : **4795488152**

Status : **Answered**

Chosen Option : **2**

Q.7 A student has an average of 42 marks in four exams. How many marks should she score in the fifth exam so that her average in all the five exams is 48 ?

- (1) 72
- (2) 65
- (3) 75
- (4) 78

Options 1. 1

- 2. 2
- 3. 3
- 4. 4

Question Type : **MCQ**

Question ID : **4795482040**

Option 1 ID : **4795488101**

Option 2 ID : **4795488102**

Option 3 ID : **4795488103**

Option 4 ID : **4795488104**

Status : **Answered**

Chosen Option : **1**

Q.8 Which of the following is not a perfect cube ?

- (1) 27000
- (2) 0.027
- (3) 0.0027
- (4) 0.000027

Options 1. 1

2. 2

3. 3

4. 4

Question Type : **MCQ**

Question ID : **4795482046**

Option 1 ID : **4795488125**

Option 2 ID : **4795488126**

Option 3 ID : **4795488127**

Option 4 ID : **4795488128**

Status : **Answered**

Chosen Option : **3**

Q.9 By selling a watch for ₹ 2250, a man lost 10%. At what price should he sell it to gain 10% ?

- (1) ₹ 2500
- (2) ₹ 2700
- (3) ₹ 2750
- (4) ₹ 2675

Options 1. 1

2. 2

3. 3

4. 4

Question Type : **MCQ**

Question ID : **4795482055**

Option 1 ID : **4795488161**

Option 2 ID : **4795488162**

Option 3 ID : **4795488163**

Option 4 ID : **4795488164**

Status : **Answered**

Chosen Option : **3**



Q.10 If the difference between an exterior angle of a regular polygon of n sides and exterior angle of another regular polygon of $(n+1)$ sides is equal to 30° . Then the value of n is :

- (1) 4
- (2) 3
- (3) 5
- (4) 7

Options 1. 1

- 2. 2
- 3. 3
- 4. 4

Question Type : **MCQ**

Question ID : **4795482047**

Option 1 ID : **4795488129**

Option 2 ID : **4795488130**

Option 3 ID : **4795488131**

Option 4 ID : **4795488132**

Status : **Not Answered**

Chosen Option : --

Q.11 A tank is filled up by pipe A and B in 4 minutes and 5 minutes respectively but pipe C can empty it in 3 minutes. If all the three pipes are opened together then $\frac{4}{5}$ part of the tank can be filled in (in minutes) :

- (1) $7\frac{5}{7}$
- (2) $7\frac{7}{6}$
- (3) $6\frac{6}{7}$
- (4) $6\frac{5}{6}$

Options 1. 1

- 2. 2
- 3. 3
- 4. 4

Question Type : **MCQ**

Question ID : **4795482050**

Option 1 ID : **4795488141**

Option 2 ID : **4795488142**

Option 3 ID : **4795488143**

Option 4 ID : **4795488144**

Status : **Answered**

Chosen Option : 3

Q.12 A contractor undertook a work to be done in 14 days. He employed 40 men. After 10 days he employed 20 more men and completed the work in time. If he had not employed additional men, then in how many days would he have completed the work ?

- (1) 15
- (2) 16
- (3) 18
- (4) 20

Options 1. 1
2. 2
3. 3
4. 4

Question Type : **MCQ**
Question ID : **4795482041**
Option 1 ID : **4795488105**
Option 2 ID : **4795488106**
Option 3 ID : **4795488107**
Option 4 ID : **4795488108**
Status : **Answered**
Chosen Option : **2**

Q.13 $\sqrt{2+\sqrt{2+\sqrt{2+\cdots\infty}}} =$

- (1) ∞
- (2) 1
- (3) 2
- (4) $\sqrt{2}$

Options 1. 1
2. 2
3. 3
4. 4

Question Type : **MCQ**
Question ID : **4795482063**
Option 1 ID : **4795488193**
Option 2 ID : **4795488194**
Option 3 ID : **4795488195**
Option 4 ID : **4795488196**
Status : **Answered**
Chosen Option : **4**

Q.14 $4 + 4.44 + 0.4 + 44.04 + 444 =$

(1) 497.24

(2) 496.88

(3) 487.66

(4) 469.88

Options

1. 1

2. 2

3. 3

4. 4

Question Type : MCQ

Question ID : 4795482036

Option 1 ID : 4795488085

Option 2 ID : 4795488086

Option 3 ID : 4795488087

Option 4 ID : 4795488088

Status : Answered

Chosen Option : 2

Q.15 If R is 25% less than Q and P is 20% of sum of R and Q then the difference between Q and R is what percentage of P ?

(1) $43\frac{1}{2}$

(2) $75\frac{1}{3}$

(3) $71\frac{3}{7}$

(4) $65\frac{1}{2}$

Options

1. 1

2. 2

3. 3

4. 4

Question Type : MCQ

Question ID : 4795482049

Option 1 ID : 4795488137

Option 2 ID : 4795488138

Option 3 ID : 4795488139

Option 4 ID : 4795488140

Status : Answered

Chosen Option : 3



Q.16

The simple interest at $x\%$ per annum for $\frac{1}{x}$ years, where $x \neq 0$ will be ₹ x on a sum of :

- (1) ₹ $\frac{100}{x^2}$
- (2) ₹ $\frac{x}{100}$
- (3) ₹ $\frac{100}{x}$
- (4) ₹ $100x$

Options 1. 1

2. 2

3. 3

4. 4

Question Type : **MCQ**

Question ID : **4795482051**

Option 1 ID : **4795488145**

Option 2 ID : **4795488146**

Option 3 ID : **4795488147**

Option 4 ID : **4795488148**

Status : **Answered**

Chosen Option : 4

Q.17

If the ratio of the area of curved surface and its circular base of a right circular cone is $\sqrt{17}:1$. The ratio of radius and the height of cone will be :

- (1) 4 : 1
- (2) 1 : 4
- (3) 2 : 3
- (4) 3 : 4

Options 1. 1

2. 2

3. 3

4. 4

Question Type : **MCQ**

Question ID : **4795482044**

Option 1 ID : **4795488117**

Option 2 ID : **4795488118**

Option 3 ID : **4795488119**

Option 4 ID : **4795488120**

Status : **Not Answered**

Chosen Option : --



- Q.18** Two pipes A and B can fill a tank in 5 hours and 6 hours respectively. Both the pipes were opened simultaneously. The tank will be filled in 3 hours, if the pipe A is turned off after :
- (1) 2 hour
 - (2) 2 hour 10 minute
 - (3) 2 hour 30 minute
 - (4) 2 hour 40 minute

- Options**
- 1. 1
 - 2. 2
 - 3. 3
 - 4. 4

Question Type : **MCQ**
Question ID : **4795482038**
Option 1 ID : **4795488093**
Option 2 ID : **4795488094**
Option 3 ID : **4795488095**
Option 4 ID : **4795488096**
Status : **Answered**
Chosen Option : **3**

- Q.19** Study the table carefully and answer the question given below.
Number of pages printed by 5 printers during 5 days :

Printers Days	A	B	C	D	E
Monday	139	211	141	184	147
Tuesday	141	164	189	151	189
Wednesday	115	159	156	136	141
Thursday	89	120	147	113	223
Friday	187	257	160	124	93

- What is the respective ratio between total number of pages printed by printer B on Wednesday and Thursday together and total number of pages printed by printer C on Monday and Thursday together ?
- (1) 30 : 31
 - (2) 21 : 22
 - (3) 31 : 32
 - (4) 11 : 13

- Options**
- 1. 1
 - 2. 2
 - 3. 3
 - 4. 4

Question Type : **MCQ**
Question ID : **4795482045**
Option 1 ID : **4795488121**
Option 2 ID : **4795488122**
Option 3 ID : **4795488123**
Option 4 ID : **4795488124**
Status : **Answered**
Chosen Option : **3**

Q.20 Mohan bought 1895 apples for distribution among a group of girls in school. He noticed that 20 apples were spoiled. He distributed rest of the apples. Each girl got thrice as many apples as number of girls in that group. The number of girls in the group was :

- (1) 27
- (2) 20
- (3) 30
- (4) 25

Options 1. 1

2. 2

3. 3

4. 4

Question Type : MCQ

Question ID : 4795482056

Option 1 ID : 4795488165

Option 2 ID : 4795488166

Option 3 ID : 4795488167

Option 4 ID : 4795488168

Status : Answered

Chosen Option : 4

Q.21 If the selling price of an item is increased by ₹ 16, profit percentage increases from 15% to 25%. What is the cost price of the item ?

- (1) ₹ 140
- (2) ₹ 150
- (3) ₹ 160
- (4) ₹ 180

Options 1. 1

2. 2

3. 3

4. 4

Question Type : MCQ

Question ID : 4795482035

Option 1 ID : 4795488081

Option 2 ID : 4795488082

Option 3 ID : 4795488083

Option 4 ID : 4795488084

Status : Answered

Chosen Option : 3



Q.22

If $\frac{b}{a+b} = \frac{5}{11}$ then value of $\frac{2a^2 + b^2}{3a^2 + 4b^2}$ is :

(1) $\frac{41}{67}$

(2) $\frac{97}{108}$

(3) $\frac{97}{208}$

(4) $\frac{47}{52}$

Options 1. 1

2. 2

3. 3

4. 4

Question Type : MCQ

Question ID : 4795482048

Option 1 ID : 4795488133

Option 2 ID : 4795488134

Option 3 ID : 4795488135

Option 4 ID : 4795488136

Status : Answered

Chosen Option : 3

Q.23 A Shopkeeper purchased two wrist watches for ₹ 3600. He sold one watch with 15% profit and the other one he had to sell with 10% loss. On the whole he neither gained nor loss. The cost price of the cheaper wrist watch, is :

(1) ₹ 1350

(2) ₹ 1440

(3) ₹ 1480

(4) ₹ 1620

Options 1. 1

2. 2

3. 3

4. 4

Question Type : MCQ

Question ID : 4795482054

Option 1 ID : 4795488157

Option 2 ID : 4795488158

Option 3 ID : 4795488159

Option 4 ID : 4795488160

Status : Answered

Chosen Option : 2



Q.24 Ram went to a shop and bought 6 shirts and 4 pants for ₹ 2500. How much (in ₹) Shyam has to pay if he bought 9 shirts and 6 pants from the same shop ?

- (1) 4500
- (2) 4000
- (3) 3750
- (4) 3500

Options 1. 1

2. 2

3. 3

4. 4

Question Type : **MCQ**

Question ID : **4795482057**

Option 1 ID : **4795488169**

Option 2 ID : **4795488170**

Option 3 ID : **4795488171**

Option 4 ID : **4795488172**

Status : **Answered**

Chosen Option : **3**

Q.25 Surinder drove 150 km at a speed of 48 km/hr. He drove another x km at a speed of 60 km/hr. If his overall average speed was 56 km/hr, then what is the value of x ?

- (1) 350
- (2) 375
- (3) 380
- (4) 400

Options 1. 1

2. 2

3. 3

4. 4

Question Type : **MCQ**

Question ID : **4795482058**

Option 1 ID : **4795488173**

Option 2 ID : **4795488174**

Option 3 ID : **4795488175**

Option 4 ID : **4795488176**

Status : **Answered**

Chosen Option : **2**



Q.26 If $(a - b)$ is 4 more than $(c + d)$ and $(a + b)$ is 2 more than $(c - d)$, then the value of $(a - c)$, is :

- (1) 2
- (2) 6
- (3) 4
- (4) 3

Options 1. 1

- 2. 2
- 3. 3
- 4. 4

Question Type : **MCQ**

Question ID : **4795482061**

Option 1 ID : **4795488185**

Option 2 ID : **4795488186**

Option 3 ID : **4795488187**

Option 4 ID : **4795488188**

Status : **Answered**

Chosen Option : **4**

Q.27 If 40% of $(A + B) = 60\%$ of $(A - B)$, then $A : B$, is :

- (1) 5 : 1
- (2) 2 : 3
- (3) 3 : 2
- (4) 1 : 5

Options 1. 1

- 2. 2
- 3. 3
- 4. 4

Question Type : **MCQ**

Question ID : **4795482059**

Option 1 ID : **4795488177**

Option 2 ID : **4795488178**

Option 3 ID : **4795488179**

Option 4 ID : **4795488180**

Status : **Answered**

Chosen Option : **1**

Q.28 What quantity of water that must be added to 40 litre of pure milk at ₹ 60/lt so that by selling the mixture at ₹ 54/lt, a profit of 8% is made ?

- (1) 4 lt
- (2) 6 lt
- (3) 8 lt
- (4) 10 lt

Options 1. 1

2. 2

3. 3

4. 4

Question Type : **MCQ**

Question ID : **4795482060**

Option 1 ID : **4795488181**

Option 2 ID : **4795488182**

Option 3 ID : **4795488183**

Option 4 ID : **4795488184**

Status : **Answered**

Chosen Option : **2**

Q.29 In how many years will a sum of money double itself at $5\frac{1}{4}\%$ simple interest per annum ?

- (1) $18\frac{1}{7}$
- (2) $24\frac{1}{7}$
- (3) $23\frac{1}{21}$
- (4) $19\frac{1}{21}$

Options 1. 1

2. 2

3. 3

4. 4

Question Type : **MCQ**

Question ID : **4795482053**

Option 1 ID : **4795488153**

Option 2 ID : **4795488154**

Option 3 ID : **4795488155**

Option 4 ID : **4795488156**

Status : **Answered**

Chosen Option : **4**



Q.30 An aeroplane flies along a field with shape of a square mounted on a semi-circle at the speeds of 100 km/hr, 200 km/hr and 300 km/hr along the side of square and 400 km/hr along semi-circle. The average speed of the plane is :

- (1) $\frac{1200(6+\pi)}{44+3\pi}$ km/hr
- (2) $\frac{1200(6-\pi)}{44+3\pi}$ km/hr
- (3) $\frac{(44+3\pi)}{1200}(6+\pi)$ km/hr
- (4) $\frac{47}{1200}(\pi-6)$ km/hr

Options 1. 1
2. 2
3. 3
4. 4

Question Type : **MCQ**
Question ID : **4795482043**
Option 1 ID : **4795488113**
Option 2 ID : **4795488114**
Option 3 ID : **4795488115**
Option 4 ID : **4795488116**
Status : **Not Answered**
Chosen Option : --

Section : **General English with Comprehension**



Comprehension:

Read the passage and answer the following question :

Print created the possibility of wide circulation of ideas, and introduced a new world of debate and discussion. Even those who disagreed with established authorities could now print and circulate their ideas. Through the printed message, they could persuade people to think differently, and move them to action. This had significance in different spheres of life.

Not everyone welcomed the printed book, and those who did also had fears about it. Many were apprehensive of the effects that the easier access to the printed word and the wider circulation of books, could have on people's minds. It was feared that if there was no control over what was printed and read then rebellious and irreligious thoughts might spread. If that happened the authority of 'valuable' literature would be destroyed. Expressed by religious authorities and monarchs, as well as many writers and artists, this anxiety was the basis of widespread criticism of the new printed literature that had begun to circulate.

Let us consider the implication of this in one sphere of life in early modern Europe – namely, religion.

In 1517, the religious reformer Martin Luther wrote Ninety Five Theses criticising many of the practices and rituals of the Roman Catholic Church. A printed copy of this was posted on a church door in Wittenberg. It challenged the Church to debate his ideas. Luther's writings were immediately reproduced in vast numbers and read widely. This led to a division within the Church and to the beginning of the **Protestant Reformation**. Luther's translation of the New Testament sold 5,000 copies within a few weeks and a second edition appeared within three months. Deeply grateful to print, Luther said, 'Printing is the ultimate gift of God and the greatest one.' Several scholars, in fact, think that print brought about a new intellectual atmosphere and helped spread the new ideas that led to the Reformation.

SubQuestion No : 1

Q.1 Which of the following statements is **correct** ?

- (1) Printing allowed ideas to circulate and spread, and persuaded people into action.
- (2) Print was feared by all as it perpetrated criminality.
- (3) Print diluted and destroyed rebellious and irreligious thoughts.
- (4) Martin Luther wrote the New Testament and sold 5,000 copies within a few weeks.

Options 1. 1
2. 2
3. 3
4. 4

Question Type : **MCQ**

Question ID : **4795482066**

Option 1 ID : **4795488201**

Option 2 ID : **4795488202**

Option 3 ID : **4795488203**

Option 4 ID : **4795488204**

Status : **Answered**

Chosen Option : **4**

Comprehension:

Read the passage and answer the following question :

Print created the possibility of wide circulation of ideas, and introduced a new world of debate and discussion. Even those who disagreed with established authorities could now print and circulate their ideas. Through the printed message, they could persuade people to think differently, and move them to action. This had significance in different spheres of life.

Not everyone welcomed the printed book, and those who did also had fears about it. Many were apprehensive of the effects that the easier access to the printed word and the wider circulation of books, could have on people's minds. It was feared that if there was no control over what was printed and read then rebellious and irreligious thoughts might spread. If that happened the authority of 'valuable' literature would be destroyed. Expressed by religious authorities and monarchs, as well as many writers and artists, this anxiety was the basis of widespread criticism of the new printed literature that had begun to circulate.

Let us consider the implication of this in one sphere of life in early modern Europe – namely, religion.

In 1517, the religious reformer Martin Luther wrote Ninety Five Theses criticising many of the practices and rituals of the Roman Catholic Church. A printed copy of this was posted on a church door in Wittenberg. It challenged the Church to debate his ideas. Luther's writings were immediately reproduced in vast numbers and read widely. This led to a division within the Church and to the beginning of the **Protestant Reformation**. Luther's translation of the New Testament sold 5,000 copies within a few weeks and a second edition appeared within three months. Deeply grateful to print, Luther said, 'Printing is the ultimate gift of God and the greatest one.' Several scholars, in fact, think that print brought about a new intellectual atmosphere and helped spread the new ideas that led to the Reformation.

SubQuestion No : 2

Q.2 Which of the following statements is **false** ?

- (1) Martin Luther wrote the Ninety Five Theses condoning Roman Catholic Church's rituals and practices.
- (2) Martin Luther was responsible for the beginning of the Protestant Reformation.
- (3) For many, printing brought about new changes and new ideas.
- (4) Printing deeply affected religious practices in Europe.

Options 1. 1

2. 2

3. 3

4. 4

Question Type : **MCQ**

Question ID : **4795482067**

Option 1 ID : **4795488205**

Option 2 ID : **4795488206**

Option 3 ID : **4795488207**

Option 4 ID : **4795488208**

Status : **Answered**

Chosen Option : 1

Comprehension:

Read the passage and answer the following question :

Print created the possibility of wide circulation of ideas, and introduced a new world of debate and discussion. Even those who disagreed with established authorities could now print and circulate their ideas. Through the printed message, they could persuade people to think differently, and move them to action. This had significance in different spheres of life.

Not everyone welcomed the printed book, and those who did also had fears about it. Many were apprehensive of the effects that the easier access to the printed word and the wider circulation of books, could have on people's minds. It was feared that if there was no control over what was printed and read then rebellious and irreligious thoughts might spread. If that happened the authority of 'valuable' literature would be destroyed. Expressed by religious authorities and monarchs, as well as many writers and artists, this anxiety was the basis of widespread criticism of the new printed literature that had begun to circulate.

Let us consider the implication of this in one sphere of life in early modern Europe – namely, religion.

In 1517, the religious reformer Martin Luther wrote Ninety Five Theses criticising many of the practices and rituals of the Roman Catholic Church. A printed copy of this was posted on a church door in Wittenberg. It challenged the Church to debate his ideas. Luther's writings were immediately reproduced in vast numbers and read widely. This led to a division within the Church and to the beginning of the **Protestant Reformation**. Luther's translation of the New Testament sold 5,000 copies within a few weeks and a second edition appeared within three months. Deeply grateful to print, Luther said, 'Printing is the ultimate gift of God and the greatest one.' Several scholars, in fact, think that print brought about a new intellectual atmosphere and helped spread the new ideas that led to the Reformation.

SubQuestion No : 3

Q.3 Complete the following sentence :

Martin Luther considered printing to be the ultimate gift of God and the greatest one because :

- (1) he sold many books.
- (2) he was able to print multiple copies of his book.
- (3) printing ushered in a new intellectual atmosphere and helped spread new ideas.
- (4) printing made him a popular author.

- Options**
1. 1
 2. 2
 3. 3
 4. 4

Question Type : **MCQ**

Question ID : **4795482071**

Option 1 ID : **4795488221**

Option 2 ID : **4795488222**

Option 3 ID : **4795488223**

Option 4 ID : **4795488224**

Status : **Answered**

Chosen Option : **3**



Comprehension:

Read the passage and answer the following question :

Print created the possibility of wide circulation of ideas, and introduced a new world of debate and discussion. Even those who disagreed with established authorities could now print and circulate their ideas. Through the printed message, they could persuade people to think differently, and move them to action. This had significance in different spheres of life.

Not everyone welcomed the printed book, and those who did also had fears about it. Many were apprehensive of the effects that the easier access to the printed word and the wider circulation of books, could have on people's minds. It was feared that if there was no control over what was printed and read then rebellious and irreligious thoughts might spread. If that happened the authority of 'valuable' literature would be destroyed. Expressed by religious authorities and monarchs, as well as many writers and artists, this anxiety was the basis of widespread criticism of the new printed literature that had begun to circulate.

Let us consider the implication of this in one sphere of life in early modern Europe - namely, religion.

In 1517, the religious reformer Martin Luther wrote Ninety Five Theses criticising many of the practices and rituals of the Roman Catholic Church. A printed copy of this was posted on a church door in Wittenberg. It challenged the Church to debate his ideas. Luther's writings were immediately reproduced in vast numbers and read widely. This led to a division within the Church and to the beginning of the **Protestant Reformation**. Luther's translation of the New Testament sold 5,000 copies within a few weeks and a second edition appeared within three months. Deeply grateful to print, Luther said, 'Printing is the ultimate gift of God and the greatest one.' Several scholars, in fact, think that print brought about a new intellectual atmosphere and helped spread the new ideas that led to the Reformation.

SubQuestion No : 4

Q.4 Which of the following words taken from the passage form a pair of synonyms ?

- (1) debate, discuss
- (2) rebellious, irreligious
- (3) intellectual, atmosphere
- (4) challenged, immediately

- Options**
- 1. 1
 - 2. 2
 - 3. 3
 - 4. 4

Question Type : **MCQ**

Question ID : **4795482073**

Option 1 ID : **4795488229**

Option 2 ID : **4795488230**

Option 3 ID : **4795488231**

Option 4 ID : **4795488232**

Status : **Answered**

Chosen Option : **1**

Comprehension:

Read the passage and answer the following question :

Print created the possibility of wide circulation of ideas, and introduced a new world of debate and discussion. Even those who disagreed with established authorities could now print and circulate their ideas. Through the printed message, they could persuade people to think differently, and move them to action. This had significance in different spheres of life.

Not everyone welcomed the printed book, and those who did also had fears about it. Many were apprehensive of the effects that the easier access to the printed word and the wider circulation of books, could have on people's minds. It was feared that if there was no control over what was printed and read then rebellious and irreligious thoughts might spread. If that happened the authority of 'valuable' literature would be destroyed. Expressed by religious authorities and monarchs, as well as many writers and artists, this anxiety was the basis of widespread criticism of the new printed literature that had begun to circulate.

Let us consider the implication of this in one sphere of life in early modern Europe - namely, religion.

In 1517, the religious reformer Martin Luther wrote Ninety Five Theses criticising many of the practices and rituals of the Roman Catholic Church. A printed copy of this was posted on a church door in Wittenberg. It challenged the Church to debate his ideas. Luther's writings were immediately reproduced in vast numbers and read widely. This led to a division within the Church and to the beginning of the **Protestant Reformation**. Luther's translation of the New Testament sold 5,000 copies within a few weeks and a second edition appeared within three months. Deeply grateful to print, Luther said, 'Printing is the ultimate gift of God and the greatest one.' Several scholars, in fact, think that print brought about a new intellectual atmosphere and helped spread the new ideas that led to the Reformation.

SubQuestion No : 5

Q.5 Find the word that does not mean the same as the given word from the passage.

'apprehensive'

- (1) fearful
- (2) persuasive
- (3) wary
- (4) anxious

- Options**
- 1. 1
 - 2. 2
 - 3. 3
 - 4. 4



Question Type : **MCQ**

Question ID : **4795482075**

Option 1 ID : **4795488237**

Option 2 ID : **4795488238**

Option 3 ID : **4795488239**

Option 4 ID : **4795488240**

Status : **Answered**

Chosen Option : **3**



Comprehension:

Read the passage and answer the following question :

Print created the possibility of wide circulation of ideas, and introduced a new world of debate and discussion. Even those who disagreed with established authorities could now print and circulate their ideas. Through the printed message, they could persuade people to think differently, and move them to action. This had significance in different spheres of life.

Not everyone welcomed the printed book, and those who did also had fears about it. Many were apprehensive of the effects that the easier access to the printed word and the wider circulation of books, could have on people's minds. It was feared that if there was no control over what was printed and read then rebellious and irreligious thoughts might spread. If that happened the authority of 'valuable' literature would be destroyed. Expressed by religious authorities and monarchs, as well as many writers and artists, this anxiety was the basis of widespread criticism of the new printed literature that had begun to circulate.

Let us consider the implication of this in one sphere of life in early modern Europe - namely, religion.

In 1517, the religious reformer Martin Luther wrote Ninety Five Theses criticising many of the practices and rituals of the Roman Catholic Church. A printed copy of this was posted on a church door in Wittenberg. It challenged the Church to debate his ideas. Luther's writings were immediately reproduced in vast numbers and read widely. This led to a division within the Church and to the beginning of the **Protestant Reformation**. Luther's translation of the New Testament sold 5,000 copies within a few weeks and a second edition appeared within three months. Deeply grateful to print, Luther said, 'Printing is the ultimate gift of God and the greatest one.' Several scholars, in fact, think that print brought about a new intellectual atmosphere and helped spread the new ideas that led to the Reformation.

SubQuestion No : 6

Q.6 Complete the following sentences :

Not everyone welcomed the printed book because :

- (1) printed books could multiply fast and easy.
- (2) everyone could now read and write.
- (3) the authority of valuable literature would be destroyed.
- (4) printing was expensive and it had a bearing on the monarchs.

- Options
1. 1
 2. 2
 3. 3
 4. 4



Question Type : **MCQ**

Question ID : **4795482074**

Option 1 ID : **4795488233**

Option 2 ID : **4795488234**

Option 3 ID : **4795488235**

Option 4 ID : **4795488236**

Status : **Answered**

Chosen Option : **2**



Comprehension:

Read the passage and answer the following question :

Print created the possibility of wide circulation of ideas, and introduced a new world of debate and discussion. Even those who disagreed with established authorities could now print and circulate their ideas. Through the printed message, they could persuade people to think differently, and move them to action. This had significance in different spheres of life.

Not everyone welcomed the printed book, and those who did also had fears about it. Many were apprehensive of the effects that the easier access to the printed word and the wider circulation of books, could have on people's minds. It was feared that if there was no control over what was printed and read then rebellious and irreligious thoughts might spread. If that happened the authority of 'valuable' literature would be destroyed. Expressed by religious authorities and monarchs, as well as many writers and artists, this anxiety was the basis of widespread criticism of the new printed literature that had begun to circulate.

Let us consider the implication of this in one sphere of life in early modern Europe - namely, religion.

In 1517, the religious reformer Martin Luther wrote Ninety Five Theses criticising many of the practices and rituals of the Roman Catholic Church. A printed copy of this was posted on a church door in Wittenberg. It challenged the Church to debate his ideas. Luther's writings were immediately reproduced in vast numbers and read widely. This led to a division within the Church and to the beginning of the **Protestant Reformation**. Luther's translation of the New Testament sold 5,000 copies within a few weeks and a second edition appeared within three months. Deeply grateful to print, Luther said, 'Printing is the ultimate gift of God and the greatest one.' Several scholars, in fact, think that print brought about a new intellectual atmosphere and helped spread the new ideas that led to the Reformation.

SubQuestion No : 7

Q.7 Which of the following words in the given passage means :

'the act of expressing disapproval'

- (1) division
- (2) apprehensive
- (3) destroyed
- (4) criticism

Options 1. 1

2. 2

3. 3

4. 4



Question Type : MCQ

Question ID : 4795482068

Option 1 ID : 4795488209

Option 2 ID : 4795488210

Option 3 ID : 4795488211

Option 4 ID : 4795488212

Status : Answered

Chosen Option : 2



Comprehension:

Read the passage and answer the following question :

Print created the possibility of wide circulation of ideas, and introduced a new world of debate and discussion. Even those who disagreed with established authorities could now print and circulate their ideas. Through the printed message, they could persuade people to think differently, and move them to action. This had significance in different spheres of life.

Not everyone welcomed the printed book, and those who did also had fears about it. Many were apprehensive of the effects that the easier access to the printed word and the wider circulation of books, could have on people's minds. It was feared that if there was no control over what was printed and read then rebellious and irreligious thoughts might spread. If that happened the authority of 'valuable' literature would be destroyed. Expressed by religious authorities and monarchs, as well as many writers and artists, this anxiety was the basis of widespread criticism of the new printed literature that had begun to circulate.

Let us consider the implication of this in one sphere of life in early modern Europe – namely, religion.

In 1517, the religious reformer Martin Luther wrote Ninety Five Theses criticising many of the practices and rituals of the Roman Catholic Church. A printed copy of this was posted on a church door in Wittenberg. It challenged the Church to debate his ideas. Luther's writings were immediately reproduced in vast numbers and read widely. This led to a division within the Church and to the beginning of the **Protestant Reformation**. Luther's translation of the New Testament sold 5,000 copies within a few weeks and a second edition appeared within three months. Deeply grateful to print, Luther said, 'Printing is the ultimate gift of God and the greatest one.' Several scholars, in fact, think that print brought about a new intellectual atmosphere and helped spread the new ideas that led to the Reformation.

SubQuestion No : 8

Q.8 Complete the following sentence :

Religious authorities and monarchs feared printing because . . .

- (1) it could affect changes that were damaging to all people's minds.
- (2) it could be destructive and cause widespread anxiety.
- (3) many were simply apprehensive.
- (4) it could possibly facilitate rebellious and irreligious thoughts.

- Options**
- 1. 1
 - 2. 2
 - 3. 3
 - 4. 4



Question Type : **MCQ**

Question ID : **4795482070**

Option 1 ID : **4795488217**

Option 2 ID : **4795488218**

Option 3 ID : **4795488219**

Option 4 ID : **4795488220**

Status : **Answered**

Chosen Option : **2**

Comprehension:

Read the passage and answer the following question :

Print created the possibility of wide circulation of ideas, and introduced a new world of debate and discussion. Even those who disagreed with established authorities could now print and circulate their ideas. Through the printed message, they could persuade people to think differently, and move them to action. This had significance in different spheres of life.

Not everyone welcomed the printed book, and those who did also had fears about it. Many were apprehensive of the effects that the easier access to the printed word and the wider circulation of books, could have on people's minds. It was feared that if there was no control over what was printed and read then rebellious and irreligious thoughts might spread. If that happened the authority of 'valuable' literature would be destroyed. Expressed by religious authorities and monarchs, as well as many writers and artists, this anxiety was the basis of widespread criticism of the new printed literature that had begun to circulate.

Let us consider the implication of this in one sphere of life in early modern Europe – namely, religion.

In 1517, the religious reformer Martin Luther wrote Ninety Five Theses criticising many of the practices and rituals of the Roman Catholic Church. A printed copy of this was posted on a church door in Wittenberg. It challenged the Church to debate his ideas. Luther's writings were immediately reproduced in vast numbers and read widely. This led to a division within the Church and to the beginning of the **Protestant Reformation**. Luther's translation of the New Testament sold 5,000 copies within a few weeks and a second edition appeared within three months. Deeply grateful to print, Luther said, 'Printing is the ultimate gift of God and the greatest one.' Several scholars, in fact, think that print brought about a new intellectual atmosphere and helped spread the new ideas that led to the Reformation.

SubQuestion No : 9

Q.9 Find the word that is opposite in meaning to the given word from the passage :

'Superficially'

- (1) immediately
- (2) deeply
- (3) widely
- (4) namely

- Options**
- 1. 1
 - 2. 2
 - 3. 3
 - 4. 4

Question Type : **MCQ**

Question ID : **4795482072**

Option 1 ID : **4795488225**

Option 2 ID : **4795488226**

Option 3 ID : **4795488227**

Option 4 ID : **4795488228**

Status : **Answered**

Chosen Option : **1**

Comprehension:

Read the passage and answer the following question :

Print created the possibility of wide circulation of ideas, and introduced a new world of debate and discussion. Even those who disagreed with established authorities could now print and circulate their ideas. Through the printed message, they could persuade people to think differently, and move them to action. This had significance in different spheres of life.

Not everyone welcomed the printed book, and those who did also had fears about it. Many were apprehensive of the effects that the easier access to the printed word and the wider circulation of books, could have on people's minds. It was feared that if there was no control over what was printed and read then rebellious and irreligious thoughts might spread. If that happened the authority of 'valuable' literature would be destroyed. Expressed by religious authorities and monarchs, as well as many writers and artists, this anxiety was the basis of widespread criticism of the new printed literature that had begun to circulate.

Let us consider the implication of this in one sphere of life in early modern Europe - namely, religion.

In 1517, the religious reformer Martin Luther wrote Ninety Five Theses criticising many of the practices and rituals of the Roman Catholic Church. A printed copy of this was posted on a church door in Wittenberg. It challenged the Church to debate his ideas. Luther's writings were immediately reproduced in vast numbers and read widely. This led to a division within the Church and to the beginning of the **Protestant Reformation**. Luther's translation of the New Testament sold 5,000 copies within a few weeks and a second edition appeared within three months. Deeply grateful to print, Luther said, 'Printing is the ultimate gift of God and the greatest one.' Several scholars, in fact, think that print brought about a new intellectual atmosphere and helped spread the new ideas that led to the Reformation.

SubQuestion No : 10

Q.10 Which of the following words from the passage means :

'a possible effect or result of an action or decision'

- (1) significance
- (2) implication
- (3) irreligious
- (4) atmosphere

Options 1. 1

2. 2

3. 3

4. 4



Question Type : MCQ

Question ID : 4795482069

Option 1 ID : 4795488213

Option 2 ID : 4795488214

Option 3 ID : 4795488215

Option 4 ID : 4795488216

Status : Answered

Chosen Option : 2

Q.11 Change into Indirect Narration.

She said, "Hari, do you have a spare pen ?

- (1) She asked Hari for a spare pen.
- (2) She asked Hari if he had a spare pen.
- (3) She asked Hari did you have a spare pen.
- (4) She said to Hari if he did have a spare pen.

Options 1. 1
2. 2
3. 3
4. 4

Question Type : **MCQ**
Question ID : **4795482092**
Option 1 ID : **4795488305**
Option 2 ID : **4795488306**
Option 3 ID : **4795488307**
Option 4 ID : **4795488308**
Status : **Answered**
Chosen Option : **2**

Q.12 Change into Indirect Speech.

Gautami said, "Why don't you change your attitude ?"

- (1) Gautami told me angrily to change your attitude.
- (2) Gautami advised me to change my attitude.
- (3) Gautami advised that I have to change my attitude.
- (4) Gautami told me that my attitude has to be changed.

Options 1. 1
2. 2
3. 3
4. 4

Question Type : **MCQ**
Question ID : **4795482095**
Option 1 ID : **4795488317**
Option 2 ID : **4795488318**
Option 3 ID : **4795488319**
Option 4 ID : **4795488320**
Status : **Answered**
Chosen Option : **2**

Q.13 Choose the most appropriate word to fill in the blank.

The meeting on that particular agenda is long _____.

- (1) overdo
- (2) overdew
- (3) overdue
- (4) overdoe

Options 1. 1
2. 2
3. 3
4. 4

Question Type : **MCQ**
Question ID : **4795482077**
Option 1 ID : **4795488245**
Option 2 ID : **4795488246**
Option 3 ID : **4795488247**
Option 4 ID : **4795488248**
Status : **Answered**
Chosen Option : **3**

Q.14 Change into Indirect Narration.

She said, "The sun rises in the east."

- (1) She said that the sun rose in the east.
- (2) She told me that the sun rose in the east.
- (3) She said that the sun rises in the east.
- (4) She told about the sun rising in the east.

Options 1. 1
2. 2
3. 3
4. 4

Question Type : **MCQ**
Question ID : **4795482091**
Option 1 ID : **4795488301**
Option 2 ID : **4795488302**
Option 3 ID : **4795488303**
Option 4 ID : **4795488304**
Status : **Answered**
Chosen Option : **3**



Q.15 _____ hard you may try, you cannot compete with him.

- (1) Although
- (2) Whether
- (3) For all that
- (4) However

Options 1. 1
2. 2
3. 3
4. 4

Question Type : **MCQ**
Question ID : **4795482076**
Option 1 ID : **4795488241**
Option 2 ID : **4795488242**
Option 3 ID : **4795488243**
Option 4 ID : **4795488244**
Status : **Answered**
Chosen Option : 4

Q.16 Change into the Active Voice.

Spanish is understood by Reema.

- (1) Reema understood Spanish.
- (2) Reema understands Spanish.
- (3) Reema can understand Spanish.
- (4) Reema could understand Spanish.

Options 1. 1
2. 2
3. 3
4. 4

Question Type : **MCQ**
Question ID : **4795482089**
Option 1 ID : **4795488293**
Option 2 ID : **4795488294**
Option 3 ID : **4795488295**
Option 4 ID : **4795488296**
Status : **Answered**
Chosen Option : 2



Q.17 Choose the most appropriate word to fill in the blank.

Sachin saw him _____ his transformation from a warrior to a peacemaker.

- (1) while
- (2) through
- (3) off
- (4) about

Options 1. 1

2. 2

3. 3

4. 4

Question Type : **MCQ**

Question ID : **4795482078**

Option 1 ID : **4795488249**

Option 2 ID : **4795488250**

Option 3 ID : **4795488251**

Option 4 ID : **4795488252**

Status : **Answered**

Chosen Option : **2**

Q.18 Change into the Passive Voice.

Did you write a letter ?

- (1) Had you written a letter ?
- (2) Were you writing a letter ?
- (3) Was a letter written by you ?
- (4) Was a letter being written by you ?

Options 1. 1

2. 2

3. 3

4. 4

Question Type : **MCQ**

Question ID : **4795482088**

Option 1 ID : **4795488289**

Option 2 ID : **4795488290**

Option 3 ID : **4795488291**

Option 4 ID : **4795488292**

Status : **Answered**

Chosen Option : **4**

<https://t.me/UPDATXAMS>

Q.19 Spot the error in the following sentence :

One of the important aspects / of a good healthcare system / the world over /

(A)

(B)

(C)

are community participation

(D)

(1) (A)

(2) (B)

(3) (C)

(4) (D)

Options 1. 1

2. 2

3. 3

4. 4

Question Type : **MCQ**

Question ID : **4795482082**

Option 1 ID : **4795488265**

Option 2 ID : **4795488266**

Option 3 ID : **4795488267**

Option 4 ID : **4795488268**

Status : **Answered**

Chosen Option : **4**

Q.20 Change into the Passive Voice.

They let us go.

(1) We were let go.

(2) We were allowed to go.

(3) They had let us go.

(4) We had been let go.

Options 1. 1

2. 2

3. 3

4. 4

Question Type : **MCQ**

Question ID : **4795482086**

Option 1 ID : **4795488281**

Option 2 ID : **4795488282**

Option 3 ID : **4795488283**

Option 4 ID : **4795488284**

Status : **Answered**

Chosen Option : **1**



Q.21 Change into the Passive Voice.

May he cross the track ?

- (1) May the track be crossed by him ?
- (2) Might the track be crossed by him ?
- (3) Can the track be crossed by him ?
- (4) Would the track be crossed by him ?

Options 1. 1

2. 2

3. 3

4. 4

Question Type : **MCQ**

Question ID : **4795482087**

Option 1 ID : **4795488285**

Option 2 ID : **4795488286**

Option 3 ID : **4795488287**

Option 4 ID : **4795488288**

Status : **Answered**

Chosen Option : **2**

Q.22 Rearrange the following sentences in a logical order to form a coherent paragraph :

- (A) Depending upon the seniority and political importance, the ministers are given the ranks of cabinet minister, minister of state or deputy minister.
- (B) Once chosen, the Prime Minister that decides who will be the ministers in the council of ministers.
- (C) In the same manner, Chief Ministers of the state choose ministers from their own party or coalition.
- (D) The President has the power to appoint a Prime Minister who has the support of the majority in Parliament.

(1) (D), (B), (A), (C)

(2) (B), (D), (A), (C)

(3) (A), (B), (C), (D)

(4) (C), (A), (B), (D)

Options 1. 1

2. 2

3. 3

4. 4

Question Type : **MCQ**

Question ID : **4795482081**

Option 1 ID : **4795488261**

Option 2 ID : **4795488262**

Option 3 ID : **4795488263**

Option 4 ID : **4795488264**

Status : **Answered**

Chosen Option : **1**



Q.23 Change to Indirect Speech.

I said to him, "Don't you know that I am your friend?"

- (1) I told him that he should know that I am his friend.
- (2) I asked him if he knew that I was his friend.
- (3) I asked him if he did not know that I was his friend.
- (4) I told him that I was his friend.

Options 1. 1

2. 2

3. 3

4. 4

Question Type : **MCQ**

Question ID : **4795482094**

Option 1 ID : **4795488313**

Option 2 ID : **4795488314**

Option 3 ID : **4795488315**

Option 4 ID : **4795488316**

Status : **Answered**

Chosen Option : **2**

Q.24 Fill in the blanks by choosing the most appropriate option from the following :

What _____ be done so that every person _____ India can access decent quality healthcare ?

- (1) will, of
- (2) would, of
- (3) should, in
- (4) can, on

Options 1. 1

2. 2

3. 3

4. 4

Question Type : **MCQ**

Question ID : **4795482080**

Option 1 ID : **4795488257**

Option 2 ID : **4795488258**

Option 3 ID : **4795488259**

Option 4 ID : **4795488260**

Status : **Answered**

Chosen Option : **1**



Q.25 Choose the most appropriate phrase to fill in the blank.

He visits the temple _____.

- (1) ever and ever
- (2) ever and anon
- (3) ever and on
- (4) every on

Options 1. 1

2. 2

3. 3

4. 4

Question Type : **MCQ**

Question ID : **4795482085**

Option 1 ID : **4795488277**

Option 2 ID : **4795488278**

Option 3 ID : **4795488279**

Option 4 ID : **4795488280**

Status : **Answered**

Chosen Option : 1

Q.26 Change into Indirect Narration.

She said, "Am I looking beautiful?"

- (1) She said if she was looking beautiful.
- (2) She asked if she was looking beautiful.
- (3) She told me she was looking beautiful.
- (4) She said she was looking beautiful.

Options 1. 1

2. 2

3. 3

4. 4

Question Type : **MCQ**

Question ID : **4795482093**

Option 1 ID : **4795488309**

Option 2 ID : **4795488310**

Option 3 ID : **4795488311**

Option 4 ID : **4795488312**

Status : **Answered**

Chosen Option : 2

Q.27 Choose the most appropriate phrase to fill in the blank.

Although he hosted the feast, his brother had to _____.

- (1) foot the bill
- (2) feet the bill
- (3) feet out upon
- (4) find the bill

Options 1. 1

2. 2

3. 3

4. 4

Question Type : **MCQ**

Question ID : **4795482084**

Option 1 ID : **4795488273**

Option 2 ID : **4795488274**

Option 3 ID : **4795488275**

Option 4 ID : **4795488276**

Status : **Answered**

Chosen Option : 1

Q.28 Choose the most appropriate word to fill in the blank.

We don't know what _____ her to commit this crime.

- (1) prompted
- (2) excited
- (3) roused
- (4) attracted

Options 1. 1

2. 2

3. 3

4. 4

Question Type : **MCQ**

Question ID : **4795482079**

Option 1 ID : **4795488253**

Option 2 ID : **4795488254**

Option 3 ID : **4795488255**

Option 4 ID : **4795488256**

Status : **Answered**

Chosen Option : 1

<https://t.me/UPDATXAMS>



Q.29 Spot the error in the following sentence :

Equality and freedom or liberty, / are the two rights / that is most essential / to a democracy
(A) (B) (C) (D)

- (1) (A)
- (2) (B)
- (3) (C)
- (4) (D)

Options 1. 1
2. 2
3. 3
4. 4

Question Type : **MCQ**
Question ID : **4795482083**
Option 1 ID : **4795488269**
Option 2 ID : **4795488270**
Option 3 ID : **4795488271**
Option 4 ID : **4795488272**
Status : **Answered**
Chosen Option : **3**

Q.30 Change into the Active Voice.

Roy could be helped by Rupak.

- (1) Rupak could help Roy.
- (2) Rupak can help Roy.
- (3) Rupak helped Roy.
- (4) Rupak, please help Roy.

Options 1. 1
2. 2
3. 3
4. 4

Question Type : **MCQ**
Question ID : **4795482090**
Option 1 ID : **4795488297**
Option 2 ID : **4795488298**
Option 3 ID : **4795488299**
Option 4 ID : **4795488300**
Status : **Answered**
Chosen Option : **2**



Comprehension:

Fill in the blank by choosing the right option :

South India was famous ____ (i) ____ gold, spices, and precious stones. Pepper was particularly ____ (ii) ____ in the Roman Empire, so much so ____ (iii) ____ it was known as black gold. So, traders carried many of these goods to Rome in ships ____ (iv) ____ the seas, and ____ (v) ____ land in caravans.

SubQuestion No : 31

- Q.31 (ii) (1) values
(2) valued
(3) valuable
(4) value

- Options 1. 1
2. 2
3. 3
4. 4

Question Type : MCQ
Question ID : 4795482098
Option 1 ID : 4795488325
Option 2 ID : 4795488326
Option 3 ID : 4795488327
Option 4 ID : 4795488328
Status : Answered
Chosen Option : 2

Comprehension:

Fill in the blank by choosing the right option :

South India was famous ____ (i) ____ gold, spices, and precious stones. Pepper was particularly ____ (ii) ____ in the Roman Empire, so much so ____ (iii) ____ it was known as black gold. So, traders carried many of these goods to Rome in ships ____ (iv) ____ the seas, and ____ (v) ____ land in caravans.

SubQuestion No : 32

- Q.32 (iv) (1) throughout
(2) inside
(3) outside
(4) across

- Options 1. 1
2. 2
3. 3
4. 4

Question Type : MCQ
Question ID : 4795482100
Option 1 ID : 4795488333
Option 2 ID : 4795488334
Option 3 ID : 4795488335
Option 4 ID : 4795488336
Status : Answered
Chosen Option : 1

Comprehension:

Fill in the blank by choosing the right option :

South India was famous ____ (i) ____ gold, spices, and precious stones. Pepper was particularly ____ (ii) ____ in the Roman Empire, so much so ____ (iii) ____ it was known as black gold. So, traders carried many of these goods to Rome in ships ____ (iv) ____ the seas, and ____ (v) ____ land in caravans.

SubQuestion No : 33

Q.33

- (i) (1) about
(2) of
(3) for
(4) throughout

Options 1. 1

2. 2

3. 3

4. 4

Question Type : **MCQ**

Question ID : **4795482097**

Option 1 ID : **4795488321**

Option 2 ID : **4795488322**

Option 3 ID : **4795488323**

Option 4 ID : **4795488324**

Status : **Answered**

Chosen Option : **3**

Comprehension:

Fill in the blank by choosing the right option :

South India was famous ____ (i) ____ gold, spices, and precious stones. Pepper was particularly ____ (ii) ____ in the Roman Empire, so much so ____ (iii) ____ it was known as black gold. So, traders carried many of these goods to Rome in ships ____ (iv) ____ the seas, and ____ (v) ____ land in caravans.

SubQuestion No : 34

Q.34

- (v) (1) by
(2) in
(3) over
(4) around

Options 1. 1

2. 2

3. 3

4. 4

Question Type : **MCQ**

Question ID : **4795482101**

Option 1 ID : **4795488337**

Option 2 ID : **4795488338**

Option 3 ID : **4795488339**

Option 4 ID : **4795488340**

Status : **Answered**

Chosen Option : **1**

Comprehension:

Fill in the blank by choosing the right option :

South India was famous ____ (i) ____ gold, spices, and precious stones. Pepper was particularly ____ (ii) ____ in the Roman Empire, so much so ____ (iii) ____ it was known as black gold. So, traders carried many of these goods to Rome in ships ____ (iv) ____ the seas, and ____ (v) ____ land in caravans.

SubQuestion No : 35

- Q.35** (iii) (1) for
(2) because
(3) there
(4) that

- Options** 1. 1
2. 2
3. 3
4. 4

Question Type : **MCQ**

Question ID : **4795482099**

Option 1 ID : **4795488329**

Option 2 ID : **4795488330**

Option 3 ID : **4795488331**

Option 4 ID : **4795488332**

Status : **Answered**

Chosen Option : **4**

Q.36 Choose the most appropriate word to fill in the blank.

We must leave now _____ it is getting dark.

- (1) since
(2) as long as
(3) as soon as
(4) when

- Options** 1. 1
2. 2
3. 3
4. 4

Question Type : **MCQ**

Question ID : **4795482114**

Option 1 ID : **4795488389**

Option 2 ID : **4795488390**

Option 3 ID : **4795488391**

Option 4 ID : **4795488392**

Status : **Answered**

Chosen Option : **1**

Q.37 Which of the given options can fill in the blank in all the three sentences ?

(A) I asked him for a favour as a _____.

(B) He is the _____ man for the job.

(C) This is a fault that will _____ itself.

(1) gift

(2) right

(3) wright

(4) rite

Options 1. 1

2. 2

3. 3

4. 4

Question Type : **MCQ**

Question ID : **4795482113**

Option 1 ID : **4795488385**

Option 2 ID : **4795488386**

Option 3 ID : **4795488387**

Option 4 ID : **4795488388**

Status : **Answered**

Chosen Option : **2**

Q.38 Choose the most appropriate option from the following that is opposite in meaning to :

'Diffidence'

(1) Similar

(2) Identical

(3) Confidence

(4) Discord

Options 1. 1

2. 2

3. 3

4. 4

Question Type : **MCQ**

Question ID : **4795482102**

Option 1 ID : **4795488341**

Option 2 ID : **4795488342**

Option 3 ID : **4795488343**

Option 4 ID : **4795488344**

Status : **Answered**

Chosen Option : **1**

Q.39 Complete the following sentence by choosing the most appropriate question tag :

Everybody was watching the match, _____ ?

- (1) won't they
- (2) wasn't they
- (3) weren't they
- (4) didn't everybody

Options 1. 1
2. 2
3. 3
4. 4

Question Type : **MCQ**
Question ID : **4795482108**
Option 1 ID : **4795488365**
Option 2 ID : **4795488366**
Option 3 ID : **4795488367**
Option 4 ID : **4795488368**
Status : **Answered**
Chosen Option : **3**

Q.40 Choose the most appropriate synonym from the given options :

'Fallacy'

- (1) Delusion
- (2) Mortal
- (3) Notorious
- (4) Fraud

Options 1. 1
2. 2
3. 3
4. 4

Question Type : **MCQ**
Question ID : **4795482105**
Option 1 ID : **4795488353**
Option 2 ID : **4795488354**
Option 3 ID : **4795488355**
Option 4 ID : **4795488356**
Status : **Answered**
Chosen Option : **2**



Q.41 Choose the **correctly** spelt word from the following :

- (1) Vaccum
- (2) Vacuum
- (3) Vacum
- (4) Vaacum

Options 1. 1
2. 2
3. 3
4. 4

Question Type : **MCQ**
Question ID : **4795482109**
Option 1 ID : **4795488369**
Option 2 ID : **4795488370**
Option 3 ID : **4795488371**
Option 4 ID : **4795488372**
Status : **Answered**
Chosen Option : 1

Q.42 Choose the word similar in meaning to the given word :

‘WORSHIP’

- (1) Adoration
- (2) Differ
- (3) Retain
- (4) Yield

Options 1. 1
2. 2
3. 3
4. 4

Question Type : **MCQ**
Question ID : **4795482106**
Option 1 ID : **4795488357**
Option 2 ID : **4795488358**
Option 3 ID : **4795488359**
Option 4 ID : **4795488360**
Status : **Answered**
Chosen Option : 1



Q.43 Choose the most appropriate word to fill in the blank.

Ram killed the snake _____ a stick.

- (1) with
- (2) by
- (3) in
- (4) to

Options 1. 1

2. 2

3. 3

4. 4

Question Type : **MCQ**

Question ID : **4795482115**

Option 1 ID : **4795488393**

Option 2 ID : **4795488394**

Option 3 ID : **4795488395**

Option 4 ID : **4795488396**

Status : **Answered**

Chosen Option : **2**

Q.44 Choose the most appropriate word to fill in the blank.

A jeep hit her while she was walking _____ the street.

- (1) in
- (2) across
- (3) behind
- (4) through

Options 1. 1

2. 2

3. 3

4. 4

Question Type : **MCQ**

Question ID : **4795482116**

Option 1 ID : **4795488397**

Option 2 ID : **4795488398**

Option 3 ID : **4795488399**

Option 4 ID : **4795488400**

Status : **Answered**

Chosen Option : **2**

Q.45 Choose the most appropriate antonym from the given options :

'Captivity'

- (1) Precision
- (2) Intermission
- (3) Pure
- (4) Liberty

Options 1. 1
2. 2
3. 3
4. 4

Question Type : **MCQ**
Question ID : **4795482104**
Option 1 ID : **4795488349**
Option 2 ID : **4795488350**
Option 3 ID : **4795488351**
Option 4 ID : **4795488352**
Status : **Not Answered**
Chosen Option : --

Q.46 Which of the following options best represents the underlined expression ?

The Vice Chancellor decided to shut down the student union office sine die.

- (1) till death
- (2) till the end
- (3) for an indefinite period
- (4) till it is decided otherwise

Options 1. 1
2. 2
3. 3
4. 4

Question Type : **MCQ**
Question ID : **4795482110**
Option 1 ID : **4795488373**
Option 2 ID : **4795488374**
Option 3 ID : **4795488375**
Option 4 ID : **4795488376**
Status : **Answered**
Chosen Option : **2**



Q.47 Choose the most appropriate question tags for the following sentence :

Open the locker, _____ ?

- (1) will you
- (2) do you
- (3) don't you
- (4) have you

Options 1. 1
2. 2
3. 3
4. 4

Question Type : **MCQ**
Question ID : **4795482107**
Option 1 ID : **4795488361**
Option 2 ID : **4795488362**
Option 3 ID : **4795488363**
Option 4 ID : **4795488364**
Status : **Answered**
Chosen Option : **3**

Q.48 Choose the most appropriate word for *a place where dead bodies are kept for identification.*

- (1) mortuary
- (2) morgue
- (3) cortege
- (4) cemetery

Options 1. 1
2. 2
3. 3
4. 4

Question Type : **MCQ**
Question ID : **4795482111**
Option 1 ID : **4795488377**
Option 2 ID : **4795488378**
Option 3 ID : **4795488379**
Option 4 ID : **4795488380**
Status : **Not Answered**
Chosen Option : **--**



Q.49 Choose the **correct** option to fill in the blank.

His speech left me _____.

- (1) to think
- (2) thought
- (3) thinking
- (4) to be thinking

Options 1. 1
2. 2
3. 3
4. 4

Question Type : **MCQ**
Question ID : 4795482112
Option 1 ID : 4795488381
Option 2 ID : 4795488382
Option 3 ID : 4795488383
Option 4 ID : 4795488384
Status : **Answered**
Chosen Option : 1

Q.50 Choose the most appropriate option that is opposite in meaning to :

‘Cause’

- (1) Happen
- (2) Effect
- (3) Reason
- (4) Repeal

Options 1. 1
2. 2
3. 3
4. 4

Question Type : **MCQ**
Question ID : 4795482103
Option 1 ID : 4795488345
Option 2 ID : 4795488346
Option 3 ID : 4795488347
Option 4 ID : 4795488348
Status : **Answered**
Chosen Option : 4

Q.1 Which one of the following statements is **true** in the context of operating systems ?

- (1) Virtual memory is a memory management scheme that allows execution of processes on a multiprocessing operating system.
- (2) Time sharing is a mechanism to provide simultaneous interactive use of a computer's memory by many processes.
- (3) In a uniprogramming system, only one job is processed by the system at a time.
- (4) File management module of an operating system takes care of Process Control Block information of a process.

- Options**
- 1. 1
 - 2. 2
 - 3. 3
 - 4. 4

Question Type : **MCQ**
Question ID : **4795482124**
Option 1 ID : **4795488429**
Option 2 ID : **4795488430**
Option 3 ID : **4795488431**
Option 4 ID : **4795488432**
Status : **Answered**
Chosen Option : **1**

Q.2 Match List - I with List - II.

- | List - I | List - II |
|-----------------|--|
| (A) Linker | (I) Translates the program from one language to another language. |
| (B) Loader | (II) Translates one line of the source code at a time and executes the translated instruction. |
| (C) Compiler | (III) Combines the object of the program with the object codes of the library and user-defined function. |
| (D) Interpreter | (IV) Responsible for transferring the executable files from the secondary storage to the memory. |

Choose the **correct** answer from the options given below :

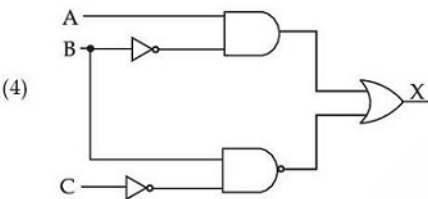
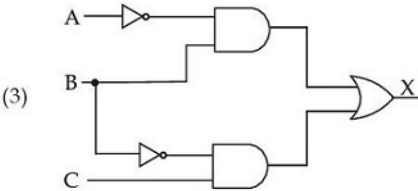
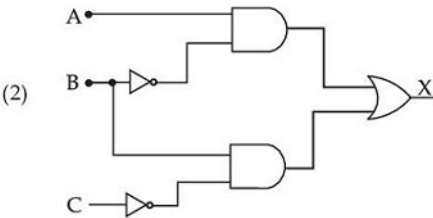
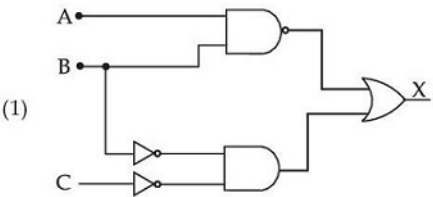
- (1) (A)-(III), (B)-(IV), (C)-(I), (D)-(II)
- (2) (A)-(IV), (B)-(III), (C)-(II), (D)-(I)
- (3) (A)-(II), (B)-(III), (C)-(IV), (D)-(I)
- (4) (A)-(III), (B)-(I), (C)-(IV), (D)-(II)

- Options**
- 1. 1
 - 2. 2
 - 3. 3
 - 4. 4

Question Type : **MCQ**
Question ID : **4795482119**
Option 1 ID : **4795488409**
Option 2 ID : **4795488410**
Option 3 ID : **4795488411**
Option 4 ID : **4795488412**
Status : **Answered**
Chosen Option : **1**

Q.3 A safety system uses three inputs to a logic circuit.

An alarm, X, sounds if input A represents ON and input B represents OFF, or if input B represents ON and input C represents OFF. Which of the following logic circuits can be used for the above safety system ?



- Options**
- 1. 1
 - 2. 2
 - 3. 3
 - 4. 4

Question Type : **MCQ**
Question ID : **4795482125**
Option 1 ID : **4795488433**
Option 2 ID : **4795488434**
Option 3 ID : **4795488435**
Option 4 ID : **4795488436**
Status : **Not Answered**
Chosen Option : --

Q.4 Given below are two statements : One is labelled as **Assertion (A)** and the other is labelled as **Reason (R)**.

Assertion (A) : Microsoft Office 365 is a cloud-based service where we can get subscription of MS Office programs.

Reason (R) : Microsoft Office 365 is free to be used for personal, academic and business purposes.

In the light of the above statements, choose the **correct** answer from the options given below :

- (1) Both **(A)** and **(R)** are true and **(R)** is the correct explanation of **(A)**.
- (2) Both **(A)** and **(R)** are true but **(R)** is not the correct explanation of **(A)**.
- (3) **(A)** is true but **(R)** is false.
- (4) **(A)** is false but **(R)** true.

- Options**
- 1. 1
 - 2. 2
 - 3. 3
 - 4. 4

Question Type : **MCQ**
Question ID : **4795482118**
Option 1 ID : **4795488405**
Option 2 ID : **4795488406**
Option 3 ID : **4795488407**
Option 4 ID : **4795488408**
Status : **Answered**
Chosen Option : **3**

Q.5 Match List - I with List - II.

List - I	List - II
(Software)	(Description)
(A) Device driver	(I) Copies files on another portable storage device.
(B) Backup utility	(II) Compresses data before storage on disk.
(C) Disk formatter	(III) Communicates with the operating system and translates data into a format understood by the device.
(D) Disk compression	(IV) Prepares a disk to allow data/files to be stored and retrieved.

Choose the **correct** answer from the options given below :

- (1) (A)-(IV), (B)-(III), (C)-(I), (D)-(II)
- (2) (A)-(III), (B)-(I), (C)-(IV), (D)-(II)
- (3) (A)-(IV), (B)-(I), (C)-(III), (D)-(II)
- (4) (A)-(III), (B)-(IV), (C)-(II), (D)-(I)

- Options**
- 1. 1
 - 2. 2
 - 3. 3
 - 4. 4

Question Type : **MCQ**
Question ID : **4795482122**
Option 1 ID : **4795488421**
Option 2 ID : **4795488422**
Option 3 ID : **4795488423**
Option 4 ID : **4795488424**
Status : **Answered**
Chosen Option : **2**

Q.6 Which of the following statements are **false** in the context of OSI model for computer networks ?

- (A) Transport layer is responsible for identifying the ways in which the data is transmitted over the network from one device to another.
- (B) Network layer manages the communication between computers on the network.
- (C) Application layer provides an interface through which users can communicate and transfer data on the network.
- (D) Presentation layer determines the way in which the data is presented to different computers.
- (E) Data link layer finds out the error which might have occurred during the transmission of packets and to correct it .

Choose the **most appropriate** answer from the options given below :

- (1) (A) and (B) only
- (2) (A) and (C) only
- (3) (B) and (D) only
- (4) (D) and (E) only

- Options**
- 1. 1
 - 2. 2
 - 3. 3
 - 4. 4

Question Type : **MCQ**
Question ID : **4795482120**
Option 1 ID : **4795488413**
Option 2 ID : **4795488414**
Option 3 ID : **4795488415**
Option 4 ID : **4795488416**
Status : **Not Answered**
Chosen Option : --

Q.7 Which of the following operating systems are designed for mobile devices ?

- (A) Unix
- (B) Android
- (C) iOS
- (D) BOSS

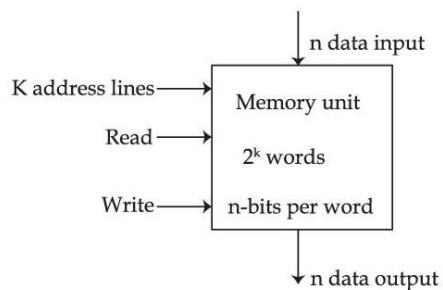
Choose the **most appropriate** answer from the options given below :

- (1) (A) and (B) only
- (2) (B) and (C) only
- (3) (B) and (D) only
- (4) (C) and (D) only

- Options**
- 1. 1
 - 2. 2
 - 3. 3
 - 4. 4

Question Type : **MCQ**
Question ID : **4795482117**
Option 1 ID : **4795488401**
Option 2 ID : **4795488402**
Option 3 ID : **4795488403**
Option 4 ID : **4795488404**
Status : **Answered**
Chosen Option : **2**

Q.8 Consider the following block diagram of a Random Access Memory (RAM) and select the TRUE statements from the following :



- (A) n data input lines provide information that is to be stored in the memory.
- (B) k address lines provide k-bits which specify the address of a particular word chosen out of 2^k available words in the memory.
- (C) Write control line specifies both read and write operations.

Choose the **most appropriate** answer from the options given below :

- (1) (A) and (B) only
- (2) (A) and (C) only
- (3) (B) and (C) only
- (4) (C) only

Options 1. 1

2. 2

3. 3

4. 4

Question Type : **MCQ**

Question ID : **4795482123**

Option 1 ID : **4795488425**

Option 2 ID : **4795488426**

Option 3 ID : **4795488427**

Option 4 ID : **4795488428**

Status : **Answered**

Chosen Option : **3**

Q.9 A set of wires that is used to connect the different internal components of the computer system for the purpose of transferring data and addresses is known as a/an _____.

- (1) bus
- (2) motherboard
- (3) accumulator
- (4) register

Options 1. 1

2. 2

3. 3

4. 4

Question Type : **MCQ**

Question ID : **4795482121**

Option 1 ID : **4795488417**

Option 2 ID : **4795488418**

Option 3 ID : **4795488419**

Option 4 ID : **4795488420**

Status : **Answered**

Chosen Option : **1**

Q.10 Given below are two statements : one is labelled as **Assertion (A)** and the other is labelled as **Reason (R)**.

Assertion (A) : An operating system is a software that provides an environment in which applications can run and provide an interface between hardware and the users.

Reason (R) : Common examples of operating systems are BIOS, CMOS, and BOOT.

In the light of the above statements, choose the correct answer from the options given below :

- (1) Both **(A)** and **(R)** are true, and **(R)** is the correct explanation of **(A)**.
- (2) Both **(A)** and **(R)** are true, but **(R)** is not the correct explanation of **(A)**.
- (3) **(A)** is true, but **(R)** is false.
- (4) **(A)** is false, but **(R)** is true.

Options

- 1. 1
- 2. 2
- 3. 3
- 4. 4

Question Type : **MCQ**
Question ID : **4795482126**
Option 1 ID : **4795488437**
Option 2 ID : **4795488438**
Option 3 ID : **4795488439**
Option 4 ID : **4795488440**
Status : **Answered**
Chosen Option : **3**

