



# Teachingninja.in



**Latest Govt Job updates**



**Private Job updates**



**Free Mock tests available**

**Visit - [teachingninja.in](https://teachingninja.in)**



Teachingninja.in

# **EPFO SSA Stage I**

**Previous Year Paper**  
**18 Aug, 2023 Shift 2**



## EPFO SSA EXAM - AUGUST 2023

Application No	
Candidate Name	
Roll No	
Test Date	18/08/2023
Test Time	2:00 PM - 4:30 PM
Subject	Social Security Assistant Stage I Examination

Section : **General Aptitude**

**Q.1** Choose the most appropriate sequence of given words from the given alternatives :

- A. Postbox
- B. Letter
- C. Envelope
- D. Delivery
- E. Clearance

- (1) C,B,E,D,A
- (2) C,B,D,E,A
- (3) B,D,E,C,A
- (4) B,C,A,E,D

- Options**
- 1. 1
  - 2. 2
  - 3. 3
  - 4. 4

Question Type : **MCQ**  
Question ID : **8782701990**  
Option 1 ID : **8782707845**  
Option 2 ID : **8782707846**  
Option 3 ID : **8782707847**  
Option 4 ID : **8782707848**  
Status : **Answered**  
Chosen Option : **4**

**Q.2** A blacksmith has five iron articles A, B, C, D and E, each having a different weight.

- (i) A weighs twice as much as B.
- (ii) B weighs four-and-a-half times as much as C.
- (iii) C weighs half as much as D.
- (iv) D weighs half as much as E.
- (v) E weighs less than A but more than C.

What is the ascending order of their weights ?

- (1)  $C < D < B < A < E$
- (2)  $B < A < C < D < E$
- (3)  $C < D < E < B < A$
- (4)  $D < C < B < E < A$

**Options** 1. 1

2. 2

3. 3

4. 4

Question Type : **MCQ**

Question ID : **8782701998**

Option 1 ID : **8782707877**

Option 2 ID : **8782707878**

Option 3 ID : **8782707879**

Option 4 ID : **8782707880**

Status : **Answered**

Chosen Option : **3**

**Q.3** Study the following arrangement carefully and answer the question given below it :

$\delta = \beta F 3 * S K 5 7 \# \$ L P V 8 @ E U M 6 \uparrow G Q \odot 9 3 \& Y T \pounds$

How many such letters are there in the arrangement each of which is either immediately preceded by a symbol or immediately followed by a number, but not both?

- (1) Three
- (2) Five
- (3) Six
- (4) Eight

**Options** 1. 1

2. 2

3. 3

4. 4

Question Type : **MCQ**

Question ID : **8782701986**

Option 1 ID : **8782707829**

Option 2 ID : **8782707830**

Option 3 ID : **8782707831**

Option 4 ID : **8782707832**

Status : **Answered**

Chosen Option : **4**

**Q.4** From a certain number of apples, a man sells half the number of apples plus 1 to the first customer, sells  $\frac{1}{3}$ rd of the remaining apples plus 1 to the second customer and  $\frac{1}{5}$ th of the remaining apples plus 1 to the third customer. He then finds that he has 3 apples left. How many apples did he have initially ?

- (1) 20
- (2) 25
- (3) 18
- (4) 15

**Options**

- 1. 1
- 2. 2
- 3. 3
- 4. 4

Question Type : **MCQ**

Question ID : **8782701992**

Option 1 ID : **8782707853**

Option 2 ID : **8782707854**

Option 3 ID : **8782707855**

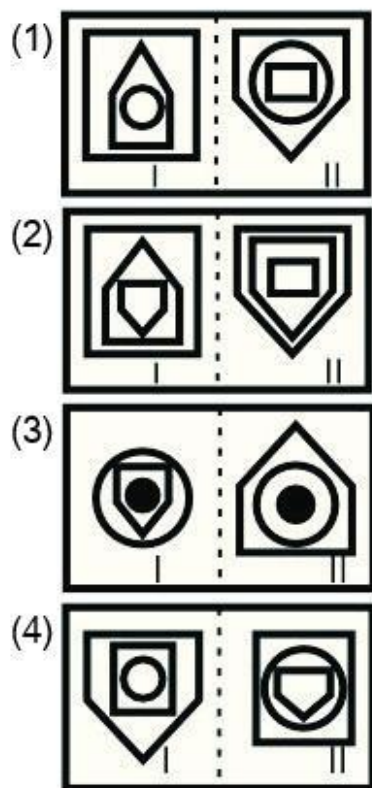
Option 4 ID : **8782707856**

Status : **Answered**

Chosen Option : **1**



Q.5 Choose odd pair of figures among the following :



Question Type : **MCQ**

Question ID : **8782701994**

Option 1 ID : **8782707861**

Option 2 ID : **8782707862**

Option 3 ID : **8782707863**

Option 4 ID : **8782707864**

Status : **Answered**

Chosen Option : **3**

**Q.6** Given below is a statement followed by two assumptions numbered I and II.

*Statements :*

The railway authority has announced that it will carry out major repair work for two days beginning Saturday on the main line connecting the two big cities in the state bringing the rail service to a halt.

*Assumptions :*

- I. People may reschedule their journey in view of the railway authority's decision.
- II. People may still plan their travel by train between the two cities even on these two days.

Identify which of the given assumption(s) are implicit in the statement.

- (1) Only I is implicit
- (2) Only II is implicit
- (3) Either I or II is implicit
- (4) Neither I nor II is implicit

**Options** 1. 1

2. 2

3. 3

4. 4

Question Type : **MCQ**

Question ID : **8782701996**

Option 1 ID : **8782707869**

Option 2 ID : **8782707870**

Option 3 ID : **8782707871**

Option 4 ID : **8782707872**

Status : **Answered**

Chosen Option : **1**

**Q.7** Given below are three statements numbered I, II and III followed by four conclusions numbered I, II, III, and IV.

*Statements :*

- I. All cars are trucks.
- II. No truck is a mare.
- III. All mares are animals.

*Conclusions :*

- I. No car is a mare.
- II. Some animals are mares.
- III. Some trucks are cars
- IV. Some cars are mares.

Identify which of the conclusions follow the given statements.

- (1) Only either I or IV and II follow.
- (2) Only either I or II follow.
- (3) Both III and IV follow.
- (4) Only I, II and III follow.

**Options** 1. 1

2. 2

3. 3

4. 4

Question Type : **MCQ**

Question ID : **8782701993**

Option 1 ID : **8782707857**

Option 2 ID : **8782707858**

Option 3 ID : **8782707859**

Option 4 ID : **8782707860**

Status : **Answered**

Chosen Option : **4**



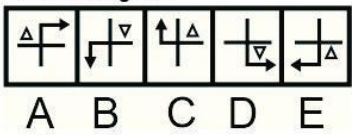
**Q.8** A clock is so placed that at 12 noon its minute hand points towards North-east. In which direction does its hour hand point at 1:30 pm ?

- (1) East
- (2) North
- (3) South
- (4) West

- Options**
- 1. 1
  - 2. 2
  - 3. 3
  - 4. 4

Question Type : **MCQ**  
Question ID : **8782702000**  
Option 1 ID : **8782707885**  
Option 2 ID : **8782707886**  
Option 3 ID : **8782707887**  
Option 4 ID : **8782707888**  
Status : **Answered**  
Chosen Option : **1**

**Q.9** Select a figure from the given alternatives which will continue the series as established by the below five figures.



- (1)
- (2)
- (3)
- (4)

- Options**
- 1. 1
  - 2. 2
  - 3. 3
  - 4. 4

Question Type : **MCQ**  
Question ID : **8782701995**  
Option 1 ID : **8782707865**  
Option 2 ID : **8782707866**  
Option 3 ID : **8782707867**  
Option 4 ID : **8782707868**  
Status : **Answered**  
Chosen Option : **2**



**Q.10** In a family, a couple has a son and a daughter. The age of the father is three times that of his daughter and the age of the son is half of that of his mother. The wife is 9 years younger to her husband and the brother is seven years older than his sister. What is the age of the mother ?

- (1) 40 years
- (2) 45 years
- (3) 60 years
- (4) 55 years

**Options** 1. 1  
2. 2  
3. 3  
4. 4

Question Type : **MCQ**  
Question ID : **8782702005**  
Option 1 ID : **8782707905**  
Option 2 ID : **8782707906**  
Option 3 ID : **8782707907**  
Option 4 ID : **8782707908**  
Status : **Answered**  
Chosen Option : **3**

**Q.11** Find the word from the given alternatives, having the same relation with the third word as the words of the first pair bear.

Rioters : Mob :: Sailors : ?  
Choose the correct alternative :

- (1) Crew
- (2) Gaggle
- (3) Brood
- (4) Horde

**Options** 1. 1  
2. 2  
3. 3  
4. 4

Question Type : **MCQ**  
Question ID : **8782702003**  
Option 1 ID : **8782707897**  
Option 2 ID : **8782707898**  
Option 3 ID : **8782707899**  
Option 4 ID : **8782707900**  
Status : **Answered**  
Chosen Option : **1**



**Q.12** Find the word from the given alternatives, having the same relation with the third word as the words of the first pair.

Winter : Hibernation :: Summer : ?

- (1) Survival
- (2) Activation
- (3) Cache
- (4) Aestivation

- Options**
- 1. 1
  - 2. 2
  - 3. 3
  - 4. 4

Question Type : **MCQ**  
Question ID : **8782701982**  
Option 1 ID : **8782707813**  
Option 2 ID : **8782707814**  
Option 3 ID : **8782707815**  
Option 4 ID : **8782707816**  
Status : **Answered**  
Chosen Option : **2**

**Q.13** Count each 1 in the following sequence of numbers that is immediately followed by 2, if 2 is not immediately followed by 3. How many such 1s are there ?

1 2 1 3 4 5 1 2 3 5 2 1 2 6 1 4 5 1 1 2 4 1 2 3 2 1 7 5 2 1 2 5

- (1) 7
- (2) 5
- (3) 4
- (4) 9

- Options**
- 1. 1
  - 2. 2
  - 3. 3
  - 4. 4

Question Type : **MCQ**  
Question ID : **8782702008**  
Option 1 ID : **8782707917**  
Option 2 ID : **8782707918**  
Option 3 ID : **8782707919**  
Option 4 ID : **8782707920**  
Status : **Answered**  
Chosen Option : **1**

**Q.14** Read the following information carefully and answer the question given below it :  
Amongst six boys A, B, C, D, E and F and five girls P, Q, R, S and T, a team of six is to be selected under the following conditions :

- (i) C cannot go with S.
- (ii) S and T have to be together.
- (iii) B cannot go with P.
- (iv) A and D have to be together.
- (v) B and R have to be together.
- (vi) D cannot go with P.
- (vii) C and Q have to be together.

If including P, the team has three girls, the other team members are :

- (1) A,D,E,S, T
- (2) B,F,R,S,T
- (3) E,C,F,Q,R
- (4) A,D,B,S,T

- Options**
- 1. 1
  - 2. 2
  - 3. 3
  - 4. 4

Question Type : **MCQ**  
Question ID : **8782701989**  
Option 1 ID : **8782707841**  
Option 2 ID : **8782707842**  
Option 3 ID : **8782707843**  
Option 4 ID : **8782707844**  
Status : **Answered**  
Chosen Option : **2**

**Q.15** Letters of the meaningful word have been jumbled up and each letter has been numbered.  
Choose the option which gives the correct order of the letters as indicated by the numbers to form the meaningful word.

R	V	T	N	D	E	I	A	O	I
1	2	3	4	5	6	7	8	9	0

- (1) 1657238094
- (2) 1657283049
- (3) 5617283094
- (4) 5617238049

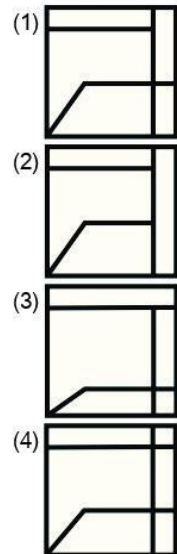
- Options**
- 1. 1
  - 2. 2
  - 3. 3
  - 4. 4

Question Type : **MCQ**  
Question ID : **8782701987**  
Option 1 ID : **8782707833**  
Option 2 ID : **8782707834**  
Option 3 ID : **8782707835**  
Option 4 ID : **8782707836**  
Status : **Answered**  
Chosen Option : **3**

Q.16 Select a figure from the four alternatives, which when placed in the blank space of fig (X) would complete its pattern.



Fig (x)



- Options
- 1. 1
  - 2. 2
  - 3. 3
  - 4. 4

Question Type : **MCQ**  
Question ID : **8782701979**  
Option 1 ID : **8782707801**  
Option 2 ID : **8782707802**  
Option 3 ID : **8782707803**  
Option 4 ID : **8782707804**  
Status : **Answered**  
Chosen Option : **1**

Q.17 Saturday was a holiday for Republic Day. The 14<sup>th</sup> of the next month is again a holiday for Shivratri. What day was it on the 14<sup>th</sup> February?

- (1) Tuesday
- (2) Monday
- (3) Thursday
- (4) Friday

- Options
- 1. 1
  - 2. 2
  - 3. 3
  - 4. 4

Question Type : **MCQ**  
Question ID : **8782701985**  
Option 1 ID : **8782707825**  
Option 2 ID : **8782707826**  
Option 3 ID : **8782707827**  
Option 4 ID : **8782707828**  
Status : **Answered**  
Chosen Option : **1**

Q.18 Given two statement :

*Statement I :*

Buildings D and B are the two extreme ends of the row.

*Statement II :*

Building E is to the immediate right of building C.

In a row of five buildings — A, B, C, D, and E, Which building is in the middle ?

- (1) Only C
- (2) Only E
- (3) Either E or C
- (4) Only A

Options 1. 1

2. 2

3. 3

4. 4

Question Type : **MCQ**

Question ID : **8782701999**

Option 1 ID : **8782707881**

Option 2 ID : **8782707882**

Option 3 ID : **8782707883**

Option 4 ID : **8782707884**

Status : **Answered**

Chosen Option : **3**

Q.19 If CONTRIBUTE is written as ETBUIRNTOC, then which letter will be in the eighth place from the left if POPULARISE is written in the same way ?

- (1) U
- (2) R
- (3) P
- (4) A

Options 1. 1

2. 2

3. 3

4. 4

Question Type : **MCQ**

Question ID : **8782702006**

Option 1 ID : **8782707909**

Option 2 ID : **8782707910**

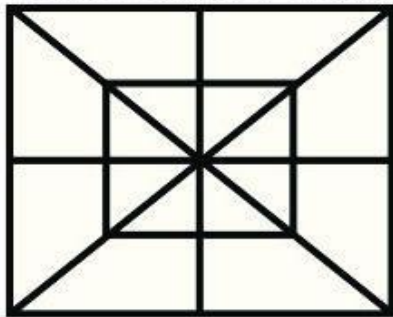
Option 3 ID : **8782707911**

Option 4 ID : **8782707912**

Status : **Answered**

Chosen Option : **1**

Q.20 Count the number of triangles and squares in the given figure :



- (1) 32 triangles, 10 squares
- (2) 28 triangles, 10 squares
- (3) 28 triangles, 8 squares
- (4) 32 triangles, 8 squares

Options 1. 1  
2. 2  
3. 3  
4. 4

Question Type : MCQ

Question ID : 8782701981

Option 1 ID : 8782707809

Option 2 ID : 8782707810

Option 3 ID : 8782707811

Option 4 ID : 8782707812

Status : Answered

Chosen Option : 1

Q.21 If  $>$  denotes  $+$ ,  $<$  denotes  $-$ ,  $+$  denotes  $\div$ ,  $\wedge$  denotes  $\times$ ,  $-$  denotes  $=$ ,  $\times$  denotes  $>$  and  $=$  denotes  $<$ ,  
choose the correct equation from the given alternatives :

- (1)  $14 > 18 + 9 = 16 + 4 < 1$
- (2)  $4 > 3 \wedge 8 < 1 - 6 + 2 > 24$
- (3)  $3 < 6 \wedge 4 > 25 = 8 + 4 > 1$
- (4)  $12 > 9 + 3 < 6 \times 25 + 5 > 6$

Options 1. 1  
2. 2  
3. 3  
4. 4

Question Type : MCQ

Question ID : 8782701991

Option 1 ID : 8782707849

Option 2 ID : 8782707850

Option 3 ID : 8782707851

Option 4 ID : 8782707852

Status : Answered

Chosen Option : 2



**Q.22** If 'air' is called 'green', 'green' is called 'blue', 'blue' is called 'sky', 'sky' is called 'yellow', 'yellow' is called 'water' and 'water' is called 'pink', then, what is the colour of clear sky ?

- (1) Blue
- (2) Yellow
- (3) Pink
- (4) Sky

**Options** 1. 1  
2. 2  
3. 3  
4. 4

Question Type : **MCQ**  
Question ID : **8782702002**  
Option 1 ID : **8782707893**  
Option 2 ID : **8782707894**  
Option 3 ID : **8782707895**  
Option 4 ID : **8782707896**  
Status : **Answered**  
Chosen Option : **4**

**Q.23** Find out the wrong term in the given series.

0, 2, 3, 5, 8, 10, 15, 18, 24, 26, 35

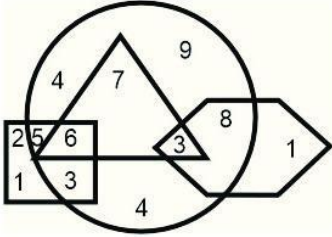
- (1) 26
- (2) 18
- (3) 10
- (4) 24

**Options** 1. 1  
2. 2  
3. 3  
4. 4

Question Type : **MCQ**  
Question ID : **8782702004**  
Option 1 ID : **8782707901**  
Option 2 ID : **8782707902**  
Option 3 ID : **8782707903**  
Option 4 ID : **8782707904**  
Status : **Not Answered**  
Chosen Option : **--**



**Q.24** Study the figure given below carefully and answer the question that follow :



Find out the sum and product of the numbers, respectively which belongs to two figures only?

- (1) 32, 120
- (2) 23, 840
- (3) 30, 384
- (4) 20, 162

**Options** 1. 1  
2. 2  
3. 3  
4. 4

Question Type : **MCQ**  
Question ID : **8782701988**  
Option 1 ID : **8782707837**  
Option 2 ID : **8782707838**  
Option 3 ID : **8782707839**  
Option 4 ID : **8782707840**  
Status : **Answered**  
Chosen Option : **2**

**Q.25** A man is facing South. He turns  $135^\circ$  in the anti-clockwise direction and then  $180^\circ$  in the clockwise direction. Which direction is he facing now?

- (1) South-west
- (2) North-east
- (3) North-west
- (4) South-east

**Options** 1. 1  
2. 2  
3. 3  
4. 4

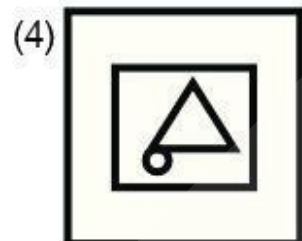
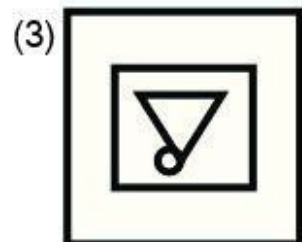
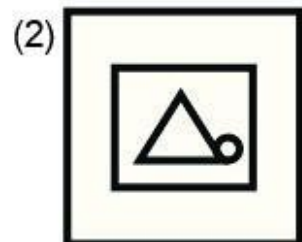
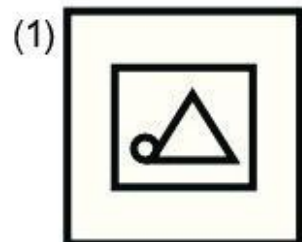
Question Type : **MCQ**  
Question ID : **8782701984**  
Option 1 ID : **8782707821**  
Option 2 ID : **8782707822**  
Option 3 ID : **8782707823**  
Option 4 ID : **8782707824**  
Status : **Answered**  
Chosen Option : **4**



Q.26 Choose the correct water image of the figure (X)



Fig (x)



- Options 1. 1  
2. 2  
3. 3  
4. 4

Question Type : **MCQ**  
Question ID : **8782701980**  
Option 1 ID : **8782707805**  
Option 2 ID : **8782707806**  
Option 3 ID : **8782707807**  
Option 4 ID : **8782707808**  
Status : **Answered**  
Chosen Option : **3**

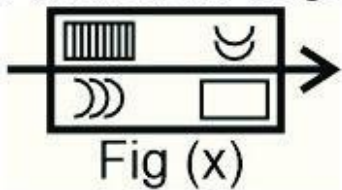
Q.27 Find the missing term in the given letter-number series : P1I, R2G, T6E, V21C, ?

- (1) A88X
- (2) X88A
- (3) X72B
- (4) Y88B

- Options
- 1. 1
  - 2. 2
  - 3. 3
  - 4. 4

Question Type : MCQ  
Question ID : 8782701983  
Option 1 ID : 8782707817  
Option 2 ID : 8782707818  
Option 3 ID : 8782707819  
Option 4 ID : 8782707820  
Status : Answered  
Chosen Option : 2

Q.28 Find the water image of the given figure (X)



- (1) A rectangle divided horizontally. The top half contains a crescent moon on the left and a vertical bar pattern on the right. The bottom half contains a rectangle on the left and three curved lines on the right. An arrow points to the left from the left side of the rectangle.
- (2) A rectangle divided horizontally. The top half contains three curved lines on the left and a rectangle on the right. The bottom half contains a vertical bar pattern on the left and a crescent moon on the right. An arrow points to the right from the right side of the rectangle.
- (3) A rectangle divided horizontally. The top half contains three curved lines on the left and a rectangle on the right. The bottom half contains a vertical bar pattern on the left and a crescent moon on the right. An arrow points to the right from the right side of the rectangle.
- (4) A rectangle divided horizontally. The top half contains a rectangle on the left and three curved lines on the right. The bottom half contains a crescent moon on the left and a vertical bar pattern on the right. An arrow points to the left from the left side of the rectangle.

- Options
- 1. 1
  - 2. 2
  - 3. 3
  - 4. 4

Question Type : MCQ  
Question ID : 8782702007  
Option 1 ID : 8782707913  
Option 2 ID : 8782707914  
Option 3 ID : 8782707915  
Option 4 ID : 8782707916  
Status : Answered  
Chosen Option : 3

**Q.29** Read the following information carefully and answer the question given below :

'A + B' means 'A is the son of B'

'A - B' means 'A is the wife of B'

'A x B' means 'A is the brother of B'

'A ÷ B' means 'A is the mother of B'

'A = B' means 'A is the sister of B'

What does  $P = R \div Q$  mean ?

- (1) P is the sister of Q
- (2) P is the aunt of Q
- (3) Q is the daughter of P
- (4) Q is the niece of P

**Options** 1. 1

2. 2

3. 3

4. 4

Question Type : **MCQ**

Question ID : **8782702001**

Option 1 ID : **8782707889**

Option 2 ID : **8782707890**

Option 3 ID : **8782707891**

Option 4 ID : **8782707892**

Status : **Answered**

Chosen Option : **2**

**Q.30** Given below is a statement followed by two arguments numbered I and II.

*Statement :*

Should all the annual examinations up to Grade V be abolished?

*Arguments :*

- I. Yes, the young students should not be burdened with such examinations which hamper their natural growth.
- II. No, the students will not study seriously as they will get automatic promotion to the next class and this will affect them in future.

Decide which of the argument(s) is/are 'strong' argument(s).

- (1) Only I is strong.
- (2) Only II is strong.
- (3) Neither I nor II is strong.
- (4) Both I and II are strong.

**Options** 1. 1

2. 2

3. 3

4. 4

<https://t.me/UPDATXAMS>

Question Type : **MCQ**

Question ID : **8782701997**

Option 1 ID : **8782707873**

Option 2 ID : **8782707874**

Option 3 ID : **8782707875**

Option 4 ID : **8782707876**

Status : **Answered**

Chosen Option : **1**

Section : General Knowledge/ General Awareness

- Q.1** Which Fundamental Right was repealed through the 44<sup>th</sup> Amendment Act of the Constitution of India ?
- (1) Right to Property
  - (2) Right to Ownership
  - (3) Right to Wealth
  - (4) Right to Work

- Options**
- 1. 1
  - 2. 2
  - 3. 3
  - 4. 4

Question Type : **MCQ**  
Question ID : **8782702031**  
Option 1 ID : **8782708009**  
Option 2 ID : **8782708010**  
Option 3 ID : **8782708011**  
Option 4 ID : **8782708012**  
Status : **Answered**  
Chosen Option : **1**

- Q.2** According to the Article 5 of the Constitution of India, who among the following is considered as a citizen of India at the commencement of the Constitution ?
- A. Every person who had his domicile in the territory of India.
  - B. Every person who was born in the territory of India.
  - C. Every person either of whose parents was born in the territory of India.
- Choose the correct answer from the options below :

- (1) A only
- (2) B only
- (3) C only
- (4) A, B and C

- Options**
- 1. 1
  - 2. 2
  - 3. 3
  - 4. 4

Question Type : **MCQ**  
Question ID : **8782702010**  
Option 1 ID : **8782707925**  
Option 2 ID : **8782707926**  
Option 3 ID : **8782707927**  
Option 4 ID : **8782707928**  
Status : **Answered**  
Chosen Option : **4**

**Q.3** Which two tribes of Meghalaya are collectively called 'Hynniewtrep' ?

- (1) Khasis and Jaintias
- (2) Jaintias and Garos
- (3) Garos and Khasis
- (4) Garos and Meitei

**Options** 1. 1

2. 2

3. 3

4. 4

Question Type : **MCQ**

Question ID : **8782702029**

Option 1 ID : **8782708001**

Option 2 ID : **8782708002**

Option 3 ID : **8782708003**

Option 4 ID : **8782708004**

Status : **Not Answered**

Chosen Option : --

**Q.4** Who among the following has been conferred with the Padma Vibhushan Award 2023 posthumously ?

- (1) Shri Zakir Hussain
- (2) Shri S.M. Krishna
- (3) Shri Balkrishna Doshi
- (4) Shri Srinivas Varadhan

**Options** 1. 1

2. 2

3. 3

4. 4

Question Type : **MCQ**

Question ID : **8782702026**

Option 1 ID : **8782707989**

Option 2 ID : **8782707990**

Option 3 ID : **8782707991**

Option 4 ID : **8782707992**

Status : **Not Answered**

Chosen Option : --



**Q.5** Which of the following dates is observed as the International Labour Day ?

- (1) 1<sup>st</sup> May
- (2) 1<sup>st</sup> June
- (3) 2<sup>nd</sup> May
- (4) 7<sup>th</sup> July

**Options** 1. 1

- 2. 2
- 3. 3
- 4. 4

Question Type : **MCQ**

Question ID : **8782702024**

Option 1 ID : **8782707981**

Option 2 ID : **8782707982**

Option 3 ID : **8782707983**

Option 4 ID : **8782707984**

Status : **Answered**

Chosen Option : 1

**Q.6** Which among the following are the components of Current Account ?

- A. Transfer payments
- B. Trade in services
- C. Investments
- D. External assistance

Choose the correct answer from the options given below :

- (1) A and B only
- (2) B and C only
- (3) C and D only
- (4) A and D only

**Options** 1. 1

- 2. 2
- 3. 3
- 4. 4

Question Type : **MCQ**

Question ID : **8782702038**

Option 1 ID : **8782708037**

Option 2 ID : **8782708038**

Option 3 ID : **8782708039**

Option 4 ID : **8782708040**

Status : **Not Answered**

Chosen Option : --

Q.7 Which one of the following is **NOT** an infectious disease ?

- (1) Asthma
- (2) Typhoid
- (3) AIDS
- (4) Cholera

Options 1. 1  
2. 2  
3. 3  
4. 4

Question Type : **MCQ**  
Question ID : **8782702035**  
Option 1 ID : **8782708025**  
Option 2 ID : **8782708026**  
Option 3 ID : **8782708027**  
Option 4 ID : **8782708028**  
Status : **Answered**  
Chosen Option : 1

Q.8 Which of the following is **NOT** a natural cause of pollution ?

- (1) Dust storms
- (2) Pollen grains
- (3) Smoke from industries
- (4) Ash from volcanoes

Options 1. 1  
2. 2  
3. 3  
4. 4

Question Type : **MCQ**  
Question ID : **8782702023**  
Option 1 ID : **8782707977**  
Option 2 ID : **8782707978**  
Option 3 ID : **8782707979**  
Option 4 ID : **8782707980**  
Status : **Answered**  
Chosen Option : 2





**Q.9** In which State of India are the Elephanta Caves located ?

- (1) Madhya Pradesh
- (2) Maharashtra
- (3) Odisha
- (4) Karnataka

**Options** 1. 1  
2. 2  
3. 3  
4. 4

Question Type : **MCQ**  
Question ID : **8782702030**  
Option 1 ID : **8782708005**  
Option 2 ID : **8782708006**  
Option 3 ID : **8782708007**  
Option 4 ID : **8782708008**  
Status : **Answered**  
Chosen Option : **2**

**Q.10** Pandit Deendayal Upadhyay National Welfare Fund provides financial assistance to which one of the following categories of people ?

- (1) Persons with physical disabilities
- (2) Retired government officials
- (3) Unemployed rural youth
- (4) Outstanding indigent sportspersons

**Options** 1. 1  
2. 2  
3. 3  
4. 4

Question Type : **MCQ**  
Question ID : **8782702033**  
Option 1 ID : **8782708017**  
Option 2 ID : **8782708018**  
Option 3 ID : **8782708019**  
Option 4 ID : **8782708020**  
Status : **Answered**  
Chosen Option : **1**





**Q.11** In the 2020 Summer Olympics, P.V. Sindhu won which medal in badminton ?

- (1) Gold medal
- (2) Silver medal
- (3) Bronze medal
- (4) None of the above

**Options** 1. 1

- 2. 2
- 3. 3
- 4. 4

Question Type : **MCQ**

Question ID : **8782702020**

Option 1 ID : **8782707965**

Option 2 ID : **8782707966**

Option 3 ID : **8782707967**

Option 4 ID : **8782707968**

Status : **Answered**

Chosen Option : **3**

**Q.12** In which of the following countries, co-operative farming has been a successful experiment ?

- A. Denmark
- B. Netherlands
- C. Belgium
- D. India

Choose the correct answer from the options given below :

- (1) A, B and D only
- (2) B and C only
- (3) A, B and C only
- (4) B, C and D only

**Options** 1. 1

- 2. 2
- 3. 3
- 4. 4

Question Type : **MCQ**

Question ID : **8782702012**

Option 1 ID : **8782707933**

Option 2 ID : **8782707934**

Option 3 ID : **8782707935**

Option 4 ID : **8782707936**

Status : **Not Answered**

Chosen Option : **--**

**Q.13** Who among the following was awarded the International Booker Prize 2023 ?

- (1) Louise Gluck
- (2) Geetanjali Shree
- (3) Annie Ernaux
- (4) Georgi Gospodinov

**Options** 1. 1

2. 2

3. 3

4. 4

Question Type : **MCQ**

Question ID : **8782702025**

Option 1 ID : **8782707985**

Option 2 ID : **8782707986**

Option 3 ID : **8782707987**

Option 4 ID : **8782707988**

Status : **Answered**

Chosen Option : **4**

**Q.14** Which among the following States/UTs have achieved the Sustainable Development Goal 1 of No Poverty ?

- (1) Kerala, Chandigarh
- (2) Gujarat, Delhi
- (3) Tamil Nadu, Delhi
- (4) Goa, Lakshadweep

**Options** 1. 1

2. 2

3. 3

4. 4

Question Type : **MCQ**

Question ID : **8782702009**

Option 1 ID : **8782707921**

Option 2 ID : **8782707922**

Option 3 ID : **8782707923**

Option 4 ID : **8782707924**

Status : **Answered**

Chosen Option : **1**



**Q.15** Correctly match the decades given in List I with the events/ inventions that occurred in the World as given in List II.

List I	List II
A. 1870-1880	I. Invention of Coca Cola
B. 1880-1890	II. Voting right for women in New Zealand
C. 1900-1910	III. Invention of telephone and electric bulb
D. 1890-1900	IV. Wright Brothers invent the aeroplane

Choose the correct answer from the options given below :

- (1) A-I, B-III, C-II, D-IV
- (2) A-IV, B-II, C-I, D-III
- (3) A-III, B-I, C-IV, D-II
- (4) A-II, B-IV, C-III, D-I

- Options**
- 1. 1
  - 2. 2
  - 3. 3
  - 4. 4

Question Type : **MCQ**  
Question ID : **8782702019**  
Option 1 ID : **8782707961**  
Option 2 ID : **8782707962**  
Option 3 ID : **8782707963**  
Option 4 ID : **8782707964**  
Status : **Not Answered**  
Chosen Option : --

**Q.16** One nanometer is :

- (1)  $10^{-3}$  m
- (2)  $10^{-6}$  m
- (3)  $10^{-9}$  m
- (4)  $10^{-12}$  m

- Options**
- 1. 1
  - 2. 2
  - 3. 3
  - 4. 4

Question Type : **MCQ**  
Question ID : **8782702032**  
Option 1 ID : **8782708013**  
Option 2 ID : **8782708014**  
Option 3 ID : **8782708015**  
Option 4 ID : **8782708016**  
Status : **Answered**  
Chosen Option : **3**

**Q.17** Aayi Mandapam, a shining white monument built during the time of Napoleon III, is located in which of the following places ?

- (1) Tamil Nadu
- (2) Daman and Diu
- (3) Andaman and Nicobar
- (4) Puducherry

**Options** 1. 1

- 2. 2
- 3. 3
- 4. 4

Question Type : **MCQ**

Question ID : **8782702028**

Option 1 ID : **8782707997**

Option 2 ID : **8782707998**

Option 3 ID : **8782707999**

Option 4 ID : **8782708000**

Status : **Answered**

Chosen Option : **1**

**Q.18** Dipa Karmakar is associated with which of the following sports ?

- (1) Boxing
- (2) Wrestling
- (3) Archery
- (4) Gymnastics

**Options** 1. 1

- 2. 2
- 3. 3
- 4. 4

Question Type : **MCQ**

Question ID : **8782702021**

Option 1 ID : **8782707969**

Option 2 ID : **8782707970**

Option 3 ID : **8782707971**

Option 4 ID : **8782707972**

Status : **Not Answered**

Chosen Option : **--**



Q.19 Which country won the FIFA 2022 World Cup ?

- (1) France
- (2) Morocco
- (3) Brazil
- (4) Argentina

Options 1. 1  
2. 2  
3. 3  
4. 4

Question Type : MCQ  
Question ID : 8782702027  
Option 1 ID : 8782707993  
Option 2 ID : 8782707994  
Option 3 ID : 8782707995  
Option 4 ID : 8782707996  
Status : Answered  
Chosen Option : 4

Q.20 Collective farming or the model of Kolkhoz was introduced in which of the following country/countries?

- A. Soviet Union
- B. Europe
- C. Canada
- D. U.S.A.

Choose the correct answer from the options given below :

- (1) A only
- (2) A and B only
- (3) A, B and C only
- (4) D only

Options 1. 1  
2. 2  
3. 3  
4. 4

Question Type : MCQ  
Question ID : 8782702014  
Option 1 ID : 8782707941  
Option 2 ID : 8782707942  
Option 3 ID : 8782707943  
Option 4 ID : 8782707944  
Status : Not Answered  
Chosen Option : --

**Q.21** Who among the following Urdu poets spoke of the need for a "North-West Indian Muslim State" as an antonomous unit within a single, loose Indian Federation in 1930 ?

- (1) Mustafa Zaidi
- (2) Jaun Elia
- (3) Ahmad Faraz
- (4) Mohammad Iqbal

**Options** 1. 1  
2. 2  
3. 3  
4. 4

Question Type : **MCQ**  
Question ID : **8782702015**  
Option 1 ID : **8782707945**  
Option 2 ID : **8782707946**  
Option 3 ID : **8782707947**  
Option 4 ID : **8782707948**  
Status : **Not Answered**  
Chosen Option : --

**Q.22** Malaria and amoebic dysentery are caused by which of the following ?

- (1) Viruse
- (2) Bacteria
- (3) Protozoa
- (4) Worm

**Options** 1. 1  
2. 2  
3. 3  
4. 4

Question Type : **MCQ**  
Question ID : **8782702017**  
Option 1 ID : **8782707953**  
Option 2 ID : **8782707954**  
Option 3 ID : **8782707955**  
Option 4 ID : **8782707956**  
Status : **Answered**  
Chosen Option : **3**

**Q.23** Which of the following newspapers/journals is/are **wrongly** matched with its/their Founders ?

- A. Bengal Gazette — James Augustus Hicky
- B. Indian Mirror — M.K. Gandhi
- C. Indian Opinion — Devendra Nath Tagore
- D. Hindustan Dainik — M.M. Malviya

Choose the correct answer from the options given below :

- (1) A only
- (2) B and C only
- (3) C and D only
- (4) D only

**Options** 1. 1

2. 2

3. 3

4. 4

Question Type : **MCQ**

Question ID : **8782702018**

Option 1 ID : **8782707957**

Option 2 ID : **8782707958**

Option 3 ID : **8782707959**

Option 4 ID : **8782707960**

Status : **Not Answered**

Chosen Option : --

**Q.24** Which part of the Constitution elaborates on elections ?

- (1) Part X
- (2) Part XI
- (3) Part XV
- (4) Part XII

**Options** 1. 1

2. 2

3. 3

4. 4

Question Type : **MCQ**

Question ID : **8782702034**

Option 1 ID : **8782708021**

Option 2 ID : **8782708022**

Option 3 ID : **8782708023**

Option 4 ID : **8782708024**

Status : **Answered**

Chosen Option : **3**

Q.25 Which of the following soils is known as regur soil ?

- (1) Alluvial soil
- (2) Arid soil
- (3) Laterite soil
- (4) Black soil

Options 1. 1  
2. 2  
3. 3  
4. 4

Question Type : **MCQ**  
Question ID : **8782702013**  
Option 1 ID : **8782707937**  
Option 2 ID : **8782707938**  
Option 3 ID : **8782707939**  
Option 4 ID : **8782707940**  
Status : **Answered**  
Chosen Option : 4

Q.26 Which among the following is **NOT** one of the Fundamental Rights guaranteed under the Right to Equality by the Constitution of India ?

- (1) Equality before law
- (2) Equal opportunity in matters of public employment
- (3) Abolition of titles
- (4) Equal pay for equal work for both men and women

Options 1. 1  
2. 2  
3. 3  
4. 4

Question Type : **MCQ**  
Question ID : **8782702016**  
Option 1 ID : **8782707949**  
Option 2 ID : **8782707950**  
Option 3 ID : **8782707951**  
Option 4 ID : **8782707952**  
Status : **Answered**  
Chosen Option : 4





**Q.27** Which among the following Statement/s is/are correct about National Statistical Commission (NSC) ?

- A. The NSC was set up in 2005
- B. Secretary, Planning Commission, is an ex- officio member of the NSC
- C. The Chief Statistician of India is the Secretary of the NSC
- D. The setting up of the NSC followed the decision of the Cabinet to accept the recommendation of the Jalan Commission, which reviewed the Indian statistical system

Choose the correct answer from the options given below :

- (1) A, B and C only
- (2) A, C and D only
- (3) B, C and D only
- (4) B and C only

**Options** 1. 1

2. 2

3. 3

4. 4

Question Type : **MCQ**

Question ID : **8782702037**

Option 1 ID : **8782708033**

Option 2 ID : **8782708034**

Option 3 ID : **8782708035**

Option 4 ID : **8782708036**

Status : **Not Answered**

Chosen Option : --

**Q.28** What changes were introduced in the 105<sup>th</sup> Amendment of the Constitution of India ?

- (1) It extends the reservation of seats for SCs and STs in Lok Sabha and Vidhan Sabha from 70 years to 80 years.
- (2) It introduced provisions necessary for the implementation of the GST regime.
- (3) It restores the power of State Governments to identify and specify Socially and Economically Backward Classes (SEBCs).
- (4) It provides for amending the First Schedule that deals with acquisition of certain territories of Bangladesh.

**Options** 1. 1

2. 2

3. 3

4. 4

Question Type : **MCQ**

Question ID : **8782702036**

Option 1 ID : **8782708029**

Option 2 ID : **8782708030**

Option 3 ID : **8782708031**

Option 4 ID : **8782708032**

Status : **Answered**

Chosen Option : **1**

**Q.29** According to Köppen's scheme of classification of climate, which of the following symbols is/are wrongly matched with its/their group ?

- A. Tropical — D
- B. Warm temperate — C
- C. Cold climates — E
- D. Cold snow forest climates — B

Choose the correct answer from the options given below :

- (1) A and B only
- (2) B and C only
- (3) D only
- (4) A and D only

**Options** 1. 1  
2. 2  
3. 3  
4. 4

Question Type : **MCQ**  
Question ID : **8782702011**  
Option 1 ID : **8782707929**  
Option 2 ID : **8782707930**  
Option 3 ID : **8782707931**  
Option 4 ID : **8782707932**  
Status : **Not Answered**  
Chosen Option : --

**Q.30** Chikungunya and Swine Flu are caused by which of the following ?

- (1) Viruse
- (2) Mosquito
- (3) Pig
- (4) Bacteria

**Options** 1. 1  
2. 2  
3. 3  
4. 4

Question Type : **MCQ**  
Question ID : **8782702022**  
Option 1 ID : **8782707973**  
Option 2 ID : **8782707974**  
Option 3 ID : **8782707975**  
Option 4 ID : **8782707976**  
Status : **Answered**  
Chosen Option : 1

Section : **Quantitative Ability**

Q.1 If  $a : b = \frac{2}{9} : \frac{1}{3}$  and  $b : c = \frac{2}{7} : \frac{5}{14}$

then  $a : b : c$ , is :

- (1) 4 : 7 : 11
- (2) 6 : 13 : 15
- (3) 8 : 12 : 15
- (4) 6 : 15 : 13

Options

- 1. 1
- 2. 2
- 3. 3
- 4. 4

Question Type : MCQ

Question ID : 8782702064

Option 1 ID : 8782708141

Option 2 ID : 8782708142

Option 3 ID : 8782708143

Option 4 ID : 8782708144

Status : Answered

Chosen Option : 3

Q.2  $\sqrt{0.0625} \div \sqrt{0.250} =$

- (1) 0.005
- (2) 0.05
- (3) 0.5
- (4) 5

Options

- 1. 1
- 2. 2
- 3. 3
- 4. 4

Question Type : MCQ

Question ID : 8782702041

Option 1 ID : 8782708049

Option 2 ID : 8782708050

Option 3 ID : 8782708051

Option 4 ID : 8782708052

Status : Answered

Chosen Option : 3



**Q.3** In first mixture, quantity of milk was 5 litres more than that of water. After adding 45 litres of second mixture (having ratio of water to milk 4 : 5) in the first mixture ratio of water to milk in the final mixture becomes 9 : 11. The total quantity of water (in litre) in the final mixture, will be :

- (1) 48
- (2) 40
- (3) 42
- (4) 45

**Options** 1. 1  
2. 2  
3. 3  
4. 4

Question Type : **MCQ**  
Question ID : **8782702049**  
Option 1 ID : **8782708081**  
Option 2 ID : **8782708082**  
Option 3 ID : **8782708083**  
Option 4 ID : **8782708084**  
Status : **Answered**  
Chosen Option : **4**

**Q.4** On every garment, a shopkeeper marks 50% above their cost price and allows 20% discount. His profit percentage will be :

- (1) 20
- (2) 22
- (3) 25
- (4) 30

**Options** 1. 1  
2. 2  
3. 3  
4. 4

Question Type : **MCQ**  
Question ID : **8782702042**  
Option 1 ID : **8782708053**  
Option 2 ID : **8782708054**  
Option 3 ID : **8782708055**  
Option 4 ID : **8782708056**  
Status : **Answered**  
Chosen Option : **1**

**Q.5** The angles of a triangle are in arithmetic progressions (A.P). If the ratio of the smallest angle and the highest angle is  $60^\circ : 180^\circ$ , then the angles of a triangle are :

- (1)  $30^\circ, 60^\circ, 90^\circ$
- (2)  $40^\circ, 60^\circ, 80^\circ$
- (3)  $20^\circ, 60^\circ, 100^\circ$
- (4)  $50^\circ, 60^\circ, 70^\circ$

**Options** 1. 1

- 2. 2
- 3. 3
- 4. 4

Question Type : **MCQ**

Question ID : **8782702062**

Option 1 ID : **8782708133**

Option 2 ID : **8782708134**

Option 3 ID : **8782708135**

Option 4 ID : **8782708136**

Status : **Answered**

Chosen Option : 1

**Q.6** P is the mean proportion of 16 and 49. If Q is the fourth proportion of 8, 12 and 14, then the value of  $\sqrt{P + Q}$ , is :

- (1) 6
- (2) 7
- (3) 8
- (4) 9

**Options** 1. 1

- 2. 2
- 3. 3
- 4. 4

Question Type : **MCQ**

Question ID : **8782702040**

Option 1 ID : **8782708045**

Option 2 ID : **8782708046**

Option 3 ID : **8782708047**

Option 4 ID : **8782708048**

Status : **Answered**

Chosen Option : 2

Q.7 Which number will come in place of question mark ?

7, 5, 7, 13, 29, ?, 232

(1) 35

(2) 46

(3) 57

(4) 76

Options 1. 1

2. 2

3. 3

4. 4

Question Type : MCQ

Question ID : 8782702060

Option 1 ID : 8782708125

Option 2 ID : 8782708126

Option 3 ID : 8782708127

Option 4 ID : 8782708128

Status : Not Answered

Chosen Option : --

Q.8 Anshu donated 6% of her salary to a charity fund and deposited 12% of the remaining in a bank. If now she has ₹ 33,088 left with her, then her salary is :

(1) ₹ 40,000

(2) ₹ 42,000

(3) ₹ 43,000

(4) ₹ 43,500

Options 1. 1

2. 2

3. 3

4. 4

Question Type : MCQ

Question ID : 8782702052

Option 1 ID : 8782708093

Option 2 ID : 8782708094

Option 3 ID : 8782708095

Option 4 ID : 8782708096

Status : Answered

Chosen Option : 4



**Q.9** A piece of cloth measured with a metre stick, one cm short, is 50 metres long. What will be the actual length of the cloth (in cm.), if the metre stick is correct ?

- (1) 4,500
- (2) 4,950
- (3) 4,900
- (4) 4,590

**Options** 1. 1  
2. 2  
3. 3  
4. 4

Question Type : **MCQ**  
Question ID : **8782702058**  
Option 1 ID : **8782708117**  
Option 2 ID : **8782708118**  
Option 3 ID : **8782708119**  
Option 4 ID : **8782708120**  
Status : **Answered**  
Chosen Option : **2**

**Q.10** A sum of money amounts to ₹ 4,840 in two years and to ₹ 5,324 in three years at compound interest compounded annually. The rate of interest per annum is :

- (1) 10%
- (2) 11%
- (3) 8%
- (4) 9%

**Options** 1. 1  
2. 2  
3. 3  
4. 4

Question Type : **MCQ**  
Question ID : **8782702048**  
Option 1 ID : **8782708077**  
Option 2 ID : **8782708078**  
Option 3 ID : **8782708079**  
Option 4 ID : **8782708080**  
Status : **Answered**  
Chosen Option : **1**

**Q.11** If 28556 is divided by 121 the quotient is 236, what will be the quotient when 28.556 is divided by 0.0121 ?

- (1) 0.236
- (2) 2.36
- (3) 23.60
- (4) 2,360

**Options** 1. 1  
2. 2  
3. 3  
4. 4

Question Type : **MCQ**  
Question ID : **8782702065**  
Option 1 ID : **8782708145**  
Option 2 ID : **8782708146**  
Option 3 ID : **8782708147**  
Option 4 ID : **8782708148**  
Status : **Answered**  
Chosen Option : **4**

**Q.12** A man sitting in a train which is travelling at 50 km/hour observes that a goods train, travelling in opposite direction, takes 9 seconds to pass him. If the goods train is 280 m long, then its speed (in km/hour) will be ?

- (1) 52
- (2) 62
- (3) 72
- (4) 60

**Options** 1. 1  
2. 2  
3. 3  
4. 4

Question Type : **MCQ**  
Question ID : **8782702051**  
Option 1 ID : **8782708089**  
Option 2 ID : **8782708090**  
Option 3 ID : **8782708091**  
Option 4 ID : **8782708092**  
Status : **Answered**  
Chosen Option : **3**



**Q.13** Study the table carefully and answer the question given below.  
The given data is regarding the number of mobile phones sold by shops A, B, C and D in three different months : March, April and May.

Shops	March	April	May
A	100	84	120
B	110	100	46
C	112	88	132
D	86	92	82

What is the difference between the total number of mobile phones sold by shops C and D together in March and the number of mobile phones sold by shops A and B together in May ?

- (1) 32
- (2) 34
- (3) 48
- (4) 42

**Options** 1. 1  
2. 2  
3. 3  
4. 4

Question Type : **MCQ**  
Question ID : **8782702061**  
Option 1 ID : **8782708129**  
Option 2 ID : **8782708130**  
Option 3 ID : **8782708131**  
Option 4 ID : **8782708132**  
Status : **Answered**  
Chosen Option : **1**

**Q.14** The vertices of a triangle are P(2,3), Q(5,k) and R(1,2). If centroid is  $(\frac{8}{3}, \frac{14}{3})$ , then value of k is :

- (1) 5
- (2) 9
- (3) 8
- (4) 7

**Options** 1. 1  
2. 2  
3. 3  
4. 4

Question Type : **MCQ**  
Question ID : **8782702068**  
Option 1 ID : **8782708157**  
Option 2 ID : **8782708158**  
Option 3 ID : **8782708159**  
Option 4 ID : **8782708160**  
Status : **Answered**  
Chosen Option : **2**

**Q.15** A student added natural numbers from 1 to 10. However, he added one number twice due to which the sum became 59. What is the number which was added twice ?

- (1) 8
- (2) 2
- (3) 4
- (4) 7

**Options** 1. 1  
2. 2  
3. 3  
4. 4

Question Type : **MCQ**

Question ID : **8782702059**

Option 1 ID : **8782708121**

Option 2 ID : **8782708122**

Option 3 ID : **8782708123**

Option 4 ID : **8782708124**

Status : **Answered**

Chosen Option : 3

**Q.16**  $0.01 \times 0.001 \times 10^7 =$

- (1)  $\frac{1}{100}$
- (2)  $\frac{1}{10}$
- (3) 100
- (4) 10

**Options** 1. 1  
2. 2  
3. 3  
4. 4

Question Type : **MCQ**

Question ID : **8782702056**

Option 1 ID : **8782708109**

Option 2 ID : **8782708110**

Option 3 ID : **8782708111**

Option 4 ID : **8782708112**

Status : **Answered**

Chosen Option : 3



**Q.17**

The area of a trapezium is  $192 \text{ cm}^2$  and its non-parallel sides are equal. Its height is  $\left(\frac{3}{8}\right)^{\text{th}}$  of the sum of its parallel sides. If the ratio of the lengths of the parallel sides be 3 : 5, then the length of the diagonal (in cm), is :

- (1) 20
- (2) 12
- (3) 14
- (4) 18

**Options** 1. 1

- 2. 2
- 3. 3
- 4. 4

Question Type : **MCQ**

Question ID : **8782702063**

Option 1 ID : **8782708137**

Option 2 ID : **8782708138**

Option 3 ID : **8782708139**

Option 4 ID : **8782708140**

Status : **Answered**

Chosen Option : **1**

**Q.18**

A can do a work in 15 days. If B and C can do the same work in 12 days and A and C can do it in 10 days, then how many days will B take to do the work ?

- (1) 15
- (2) 18
- (3) 20
- (4) 21

**Options** 1. 1

- 2. 2
- 3. 3
- 4. 4

Question Type : **MCQ**

Question ID : **8782702044**

Option 1 ID : **8782708061**

Option 2 ID : **8782708062**

Option 3 ID : **8782708063**

Option 4 ID : **8782708064**

Status : **Answered**

Chosen Option : **3**



**Q.19** A library has an average of 570 visitors on Sundays and 210 on other days. The average number of visitors per day in a month of 30 days beginning with a Sunday is :

- (1) 270
- (2) 272
- (3) 276
- (4) 285

**Options** 1. 1  
2. 2  
3. 3  
4. 4

Question Type : **MCQ**  
Question ID : **8782702045**  
Option 1 ID : **8782708065**  
Option 2 ID : **8782708066**  
Option 3 ID : **8782708067**  
Option 4 ID : **8782708068**  
Status : **Answered**  
Chosen Option : **1**

**Q.20** A boat goes downstream and covers a distance of 40 km in 2 hours. While coming back the boat takes 30 minutes longer to cover the same distance. The speed of the current (in km/h), is :

- (1) 1
- (2) 1.4
- (3) 1.5
- (4) 2

**Options** 1. 1  
2. 2  
3. 3  
4. 4

Question Type : **MCQ**  
Question ID : **8782702039**  
Option 1 ID : **8782708041**  
Option 2 ID : **8782708042**  
Option 3 ID : **8782708043**  
Option 4 ID : **8782708044**  
Status : **Answered**  
Chosen Option : **4**

**Q.21** A school has 4 sections of Class X having 20, 30, 35 and 15 students. The average marks obtained in a test are 55, 45, 60 and 50, respectively for the 4 sections. What is the overall average of marks per student ?

- (1) 51
- (2) 52
- (3) 54
- (4) 53

**Options** 1. 1  
2. 2  
3. 3  
4. 4

Question Type : **MCQ**  
Question ID : **8782702046**  
Option 1 ID : **8782708069**  
Option 2 ID : **8782708070**  
Option 3 ID : **8782708071**  
Option 4 ID : **8782708072**  
Status : **Answered**  
Chosen Option : **4**

**Q.22** An article worth ₹ 15,000 was sold by A to B at 5% profit. B sold it back to A at 2% loss. In the entire transaction, what is the gain/loss percentage of A ?

- (1) Gain 2.8%
- (2) Loss 3%
- (3) Loss 3.1%
- (4) Gain 2.9%

**Options** 1. 1  
2. 2  
3. 3  
4. 4

Question Type : **MCQ**  
Question ID : **8782702047**  
Option 1 ID : **8782708073**  
Option 2 ID : **8782708074**  
Option 3 ID : **8782708075**  
Option 4 ID : **8782708076**  
Status : **Answered**  
Chosen Option : **4**

**Q.23** If x, y and z are three sums of money such that y is the simple interest on x, z is the simple interest on y for the same time period with same rate of interest, then what is true for all values of x, y and z ?

(1)  $y^2 = xz$

(2)  $2y = x + z$

(3)  $y = \frac{2xz}{x+z}$

(4)  $y = \frac{xz}{x+z}$

**Options** 1. 1

2. 2

3. 3

4. 4

Question Type : MCQ

Question ID : 8782702055

Option 1 ID : 8782708105

Option 2 ID : 8782708106

Option 3 ID : 8782708107

Option 4 ID : 8782708108

Status : Answered

Chosen Option : 1

**Q.24** The compound interest when a sum of ₹ 20,000 is invested for 1 year 3 months, at 10% per annum compounded annually, is :

(1) ₹ 2,550

(2) ₹ 2,650

(3) ₹ 2,700

(4) ₹ 2,750

**Options** 1. 1

2. 2

3. 3

4. 4

Question Type : MCQ

Question ID : 8782702066

Option 1 ID : 8782708149

Option 2 ID : 8782708150

Option 3 ID : 8782708151

Option 4 ID : 8782708152

Status : Answered

Chosen Option : 1



Q.25

If  $(x-4)^3 + (x-9)^3 + (x-8)^3 = 3(x-4)(x-9)(x-8)$ , then the value of  $\sqrt{\frac{x^2+1}{2}}$ , is :

- (1) 3
- (2) 4
- (3) 5
- (4) 2

Options

- 1. 1
- 2. 2
- 3. 3
- 4. 4

Question Type : MCQ

Question ID : 8782702050

Option 1 ID : 8782708085

Option 2 ID : 8782708086

Option 3 ID : 8782708087

Option 4 ID : 8782708088

Status : Answered

Chosen Option : 3

Q.26 An amount of money on which compound interest at 18% per annum would fetch ₹1,620 more, if the interest is payable half yearly for one year. The amount is :

- (1) ₹ 3,00,000
- (2) ₹ 2,50,000
- (3) ₹ 2,00,000
- (4) ₹ 1,80,000

Options

- 1. 1
- 2. 2
- 3. 3
- 4. 4

Question Type : MCQ

Question ID : 8782702053

Option 1 ID : 8782708097

Option 2 ID : 8782708098

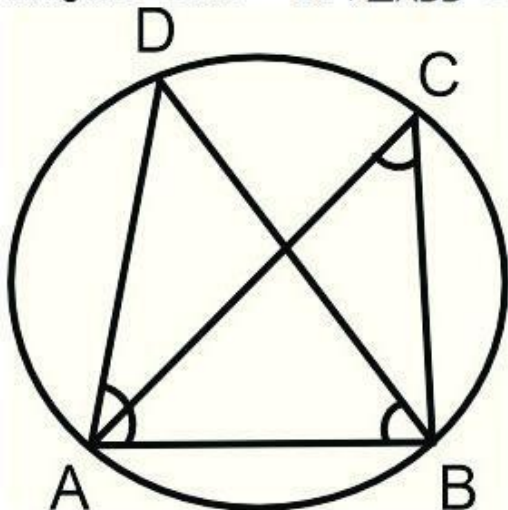
Option 3 ID : 8782708099

Option 4 ID : 8782708100

Status : Answered

Chosen Option : 3

Q.27 In figure  $\angle DAB = 60^\circ$ ,  $\angle ABD = 40^\circ$ , then value of  $\angle ACB$  is :



- (1)  $90^\circ$
- (2)  $40^\circ$
- (3)  $60^\circ$
- (4)  $80^\circ$

Options 1. 1

2. 2

3. 3

4. 4

Question Type : **MCQ**

Question ID : **8782702067**

Option 1 ID : **8782708153**

Option 2 ID : **8782708154**

Option 3 ID : **8782708155**

Option 4 ID : **8782708156**

Status : **Answered**

Chosen Option : **4**

Q.28 The monthly salaries of A and B are in the ratio 6 : 7. From her monthly salary, A gives  $\frac{3}{5}$  to her mother, spends 15% towards household expenses, 18% towards a loan and is left with ₹ 2,100. What is the monthly salary of B ?

- (1) ₹ 25,000
- (2) ₹ 30,000
- (3) ₹ 35,000
- (4) ₹ 28,000

Options 1. 1

2. 2

3. 3

4. 4

Question Type : **MCQ**

Question ID : **8782702043**

Option 1 ID : **8782708057**

Option 2 ID : **8782708058**

Option 3 ID : **8782708059**

Option 4 ID : **8782708060**

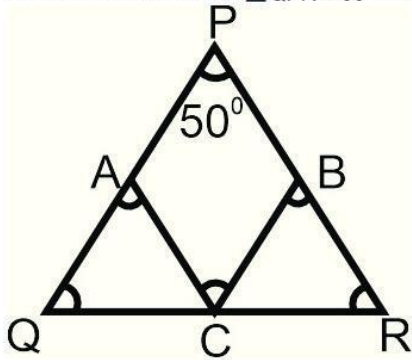
Status : **Answered**

Chosen Option : **3**





**Q.29** In the figure below, points A, B and C are taken on PQ, PR and QR, respectively, such that  $QC=AC$  and  $CR=CB$ . If  $\angle QPR = 50^\circ$  then  $\angle ACB$  is equal to :



- (1)  $100^\circ$
- (2)  $130^\circ$
- (3)  $40^\circ$
- (4)  $80^\circ$

**Options** 1. 1

2. 2

3. 3

4. 4

Question Type : **MCQ**

Question ID : **8782702054**

Option 1 ID : **8782708101**

Option 2 ID : **8782708102**

Option 3 ID : **8782708103**

Option 4 ID : **8782708104**

Status : **Answered**

Chosen Option : **4**

**Q.30** A car travels a distance of 50 km in 150 minutes. How much fast, on an average speed (in km/hour), must it accelerate to make such trip in  $\frac{5}{6}$  hour less time ?

- (1) 10
- (2) 20
- (3) 30
- (4) 15

**Options** 1. 1

2. 2

3. 3

4. 4

Question Type : **MCQ**

Question ID : **8782702057**

Option 1 ID : **8782708113**

Option 2 ID : **8782708114**

Option 3 ID : **8782708115**

Option 4 ID : **8782708116**

Status : **Answered**

Chosen Option : **1**

### Comprehension:

Read the given passage and answer the questions that follow : (91-100)

In Africa, in the 1890s, a fast-spreading disease of cattle plague or rinderpest had a terrifying impact on people's livelihoods and the local economy. This is a good example of the widespread European imperial impact on colonised societies. It shows how, in this era of conquest, even a disease affecting cattle reshaped the lives and fortunes of thousands of people and their relations with the rest of the world.

Historically, Africa had abundant land and a relatively small population. For centuries, land and livestock sustained African livelihoods and people rarely worked for a wage. In late 19<sup>th</sup> Century Africa there were few consumer goods that wages could buy. If you had been an African possessing land and livestock — and there was plenty of both — you too would have seen little reason to work for a wage.

In the late 19<sup>th</sup> Century, Europeans were attracted to Africa due to its vast resources of land and minerals. Europeans came to Africa hoping to establish plantations and mines to produce crops and minerals for export to Europe. But there was an unexpected problem — a shortage of labour willing to work for wages.

Employers used many methods to recruit and retain labour. Heavy taxes were imposed, which could be paid only by working for wages on plantations and mines. Inheritance laws were changed so that peasants were displaced from land: only one member of a family was allowed to inherit land, as a result of which the others were pushed into the labour market. Mineworkers were also confined in compounds and not allowed to move about freely.

Then came rinderpest, a devastating cattle disease.

Rinderpest arrived in Africa in the late 1880s. It was carried by infected cattle imported from British Asia to feed the Italian soldiers invading Eritrea in East Africa. Entering Africa in the east, rinderpest moved west 'like forest fire', reaching Africa's Atlantic Coast in 1892. It reached the Cape (Africa's southernmost tip) five years later. Along the way, rinderpest killed 90 per cent of the cattle.

The loss of cattle destroyed African livelihoods. Planters, mine owners and colonial governments now successfully monopolised what scarce cattle resources remained to strengthen their power and to force Africans into the labour market. Control over the scarce resource of cattle enabled European colonisers to conquer and subdue Africa.

### SubQuestion No : 1

Q.1 What is rinderpest ?

- (1) It is a widespread European imperial impact on Africa.
- (2) It is a fast-spreading and devastating cattle disease.
- (3) It is an example of Africa's livelihood and local economy.
- (4) It is an example of Africa's relation with the rest of the world.

Options

- 1. 1
- 2. 2
- 3. 3
- 4. 4

Question Type : MCQ

Question ID : 8782702071

Option 1 ID : 8782708165

Option 2 ID : 8782708166

Option 3 ID : 8782708167

Option 4 ID : 8782708168

Status : Answered

Chosen Option : 2

### Comprehension:

Read the given passage and answer the questions that follow : (91-100)

In Africa, in the 1890s, a fast-spreading disease of cattle plague or rinderpest had a terrifying impact on people's livelihoods and the local economy. This is a good example of the widespread European imperial impact on colonised societies. It shows how, in this era of conquest, even a disease affecting cattle reshaped the lives and fortunes of thousands of people and their relations with the rest of the world.

Historically, Africa had abundant land and a relatively small population. For centuries, land and livestock sustained African livelihoods and people rarely worked for a wage. In late 19<sup>th</sup> Century Africa there were few consumer goods that wages could buy. If you had been an African possessing land and livestock — and there was plenty of both — you too would have seen little reason to work for a wage.

In the late 19<sup>th</sup> Century, Europeans were attracted to Africa due to its vast resources of land and minerals. Europeans came to Africa hoping to establish plantations and mines to produce crops and minerals for export to Europe. But there was an unexpected problem — a shortage of labour willing to work for wages.

Employers used many methods to recruit and retain labour. Heavy taxes were imposed, which could be paid only by working for wages on plantations and mines. Inheritance laws were changed so that peasants were displaced from land: only one member of a family was allowed to inherit land, as a result of which the others were pushed into the labour market. Mineworkers were also confined in compounds and not allowed to move about freely.

Then came rinderpest, a devastating cattle disease.

Rinderpest arrived in Africa in the late 1880s. It was carried by infected cattle imported from British Asia to feed the Italian soldiers invading Eritrea in East Africa. Entering Africa in the east, rinderpest moved west 'like forest fire', reaching Africa's Atlantic Coast in 1892. It reached the Cape (Africa's southernmost tip) five years later. Along the way, rinderpest killed 90 per cent of the cattle.

The loss of cattle destroyed African livelihoods. Planters, mine owners and colonial governments now successfully monopolised what scarce cattle resources remained to strengthen their power and to force Africans into the labour market. Control over the scarce resource of cattle enabled European colonisers to conquer and subdue Africa.

### SubQuestion No : 2

**Q.2** Choose the most appropriate synonym from the following for the given word :  
'disastrous'

- (1) displaced
- (2) devastating
- (3) monopolised
- (4) infected

- Options**
- 1. 1
  - 2. 2
  - 3. 3
  - 4. 4

Question Type : **MCQ**

Question ID : **8782702079**

Option 1 ID : **8782708197**

Option 2 ID : **8782708198**

Option 3 ID : **8782708199**

Option 4 ID : **8782708200**

Status : **Answered**

Chosen Option : **2**





### Comprehension:

Read the given passage and answer the questions that follow : (91-100)

In Africa, in the 1890s, a fast-spreading disease of cattle plague or rinderpest had a terrifying impact on people's livelihoods and the local economy. This is a good example of the widespread European imperial impact on colonised societies. It shows how, in this era of conquest, even a disease affecting cattle reshaped the lives and fortunes of thousands of people and their relations with the rest of the world.

Historically, Africa had abundant land and a relatively small population. For centuries, land and livestock sustained African livelihoods and people rarely worked for a wage. In late 19<sup>th</sup> Century Africa there were few consumer goods that wages could buy. If you had been an African possessing land and livestock — and there was plenty of both — you too would have seen little reason to work for a wage.

In the late 19<sup>th</sup> Century, Europeans were attracted to Africa due to its vast resources of land and minerals. Europeans came to Africa hoping to establish plantations and mines to produce crops and minerals for export to Europe. But there was an unexpected problem — a shortage of labour willing to work for wages.

Employers used many methods to recruit and retain labour. Heavy taxes were imposed, which could be paid only by working for wages on plantations and mines. Inheritance laws were changed so that peasants were displaced from land: only one member of a family was allowed to inherit land, as a result of which the others were pushed into the labour market. Mineworkers were also confined in compounds and not allowed to move about freely.

Then came rinderpest, a devastating cattle disease.

Rinderpest arrived in Africa in the late 1880s. It was carried by infected cattle imported from British Asia to feed the Italian soldiers invading Eritrea in East Africa. Entering Africa in the east, rinderpest moved west 'like forest fire', reaching Africa's Atlantic Coast in 1892. It reached the Cape (Africa's southernmost tip) five years later. Along the way, rinderpest killed 90 per cent of the cattle.

The loss of cattle destroyed African livelihoods. Planters, mine owners and colonial governments now successfully monopolised what scarce cattle resources remained to strengthen their power and to force Africans into the labour market. Control over the scarce resource of cattle enabled European colonisers to conquer and subdue Africa.

### SubQuestion No : 3

**Q.3** The Europeans colonised Africa because :

- (1) Africa had abundance of land and mineral resources.
- (2) Africa had few consumer goods and they saw an opportunity for trade and commerce.
- (3) African law system was not civilised enough and needed amendment.
- (4) Europeans wanted to have control over their resource of cattle.

**Options** 1. 1

2. 2

3. 3

4. 4

Question Type : **MCQ**

Question ID : **8782702073**

Option 1 ID : **8782708173**

Option 2 ID : **8782708174**

Option 3 ID : **8782708175**

Option 4 ID : **8782708176**

Status : **Answered**

Chosen Option : **1**

### Comprehension:

Read the given passage and answer the questions that follow : (91-100)

In Africa, in the 1890s, a fast-spreading disease of cattle plague or rinderpest had a terrifying impact on people's livelihoods and the local economy. This is a good example of the widespread European imperial impact on colonised societies. It shows how, in this era of conquest, even a disease affecting cattle reshaped the lives and fortunes of thousands of people and their relations with the rest of the world.

Historically, Africa had abundant land and a relatively small population. For centuries, land and livestock sustained African livelihoods and people rarely worked for a wage. In late 19<sup>th</sup> Century Africa there were few consumer goods that wages could buy. If you had been an African possessing land and livestock — and there was plenty of both — you too would have seen little reason to work for a wage.

In the late 19<sup>th</sup> Century, Europeans were attracted to Africa due to its vast resources of land and minerals. Europeans came to Africa hoping to establish plantations and mines to produce crops and minerals for export to Europe. But there was an unexpected problem — a shortage of labour willing to work for wages.

Employers used many methods to recruit and retain labour. Heavy taxes were imposed, which could be paid only by working for wages on plantations and mines. Inheritance laws were changed so that peasants were displaced from land: only one member of a family was allowed to inherit land, as a result of which the others were pushed into the labour market. Mineworkers were also confined in compounds and not allowed to move about freely.

Then came rinderpest, a devastating cattle disease.

Rinderpest arrived in Africa in the late 1880s. It was carried by infected cattle imported from British Asia to feed the Italian soldiers invading Eritrea in East Africa. Entering Africa in the east, rinderpest moved west 'like forest fire', reaching Africa's Atlantic Coast in 1892. It reached the Cape (Africa's southernmost tip) five years later. Along the way, rinderpest killed 90 per cent of the cattle.

The loss of cattle destroyed African livelihoods. Planters, mine owners and colonial governments now successfully monopolised what scarce cattle resources remained to strengthen their power and to force Africans into the labour market. Control over the scarce resource of cattle enabled European colonisers to conquer and subdue Africa.

### SubQuestion No : 4

**Q.4** The European colonisers were finally able to conquer and subdue Africa because:

- (1) the African people welcomed the establishment of plantations and mines.
- (2) the loss of cattle had destroyed African livelihood and sustenance.
- (3) the new law mandated European rule over Africa.
- (4) the Africans saw reason to work for a wage.

**Options**

- 1. 1
- 2. 2
- 3. 3
- 4. 4

Question Type : **MCQ**

Question ID : **8782702074**

Option 1 ID : **8782708177**

Option 2 ID : **8782708178**

Option 3 ID : **8782708179**

Option 4 ID : **8782708180**

Status : **Answered**

Chosen Option : **2**

**Comprehension:**

Read the given passage and answer the questions that follow : (91-100)

In Africa, in the 1890s, a fast-spreading disease of cattle plague or rinderpest had a terrifying impact on people's livelihoods and the local economy. This is a good example of the widespread European imperial impact on colonised societies. It shows how, in this era of conquest, even a disease affecting cattle reshaped the lives and fortunes of thousands of people and their relations with the rest of the world.

Historically, Africa had abundant land and a relatively small population. For centuries, land and livestock sustained African livelihoods and people rarely worked for a wage. In late 19<sup>th</sup> Century Africa there were few consumer goods that wages could buy. If you had been an African possessing land and livestock — and there was plenty of both — you too would have seen little reason to work for a wage.

In the late 19<sup>th</sup> Century, Europeans were attracted to Africa due to its vast resources of land and minerals. Europeans came to Africa hoping to establish plantations and mines to produce crops and minerals for export to Europe. But there was an unexpected problem — a shortage of labour willing to work for wages.

Employers used many methods to recruit and retain labour. Heavy taxes were imposed, which could be paid only by working for wages on plantations and mines. Inheritance laws were changed so that peasants were displaced from land: only one member of a family was allowed to inherit land, as a result of which the others were pushed into the labour market. Mineworkers were also confined in compounds and not allowed to move about freely.

Then came rinderpest, a devastating cattle disease.

Rinderpest arrived in Africa in the late 1880s. It was carried by infected cattle imported from British Asia to feed the Italian soldiers invading Eritrea in East Africa. Entering Africa in the east, rinderpest moved west 'like forest fire', reaching Africa's Atlantic Coast in 1892. It reached the Cape (Africa's southernmost tip) five years later. Along the way, rinderpest killed 90 per cent of the cattle.

The loss of cattle destroyed African livelihoods. Planters, mine owners and colonial governments now successfully monopolised what scarce cattle resources remained to strengthen their power and to force Africans into the labour market. Control over the scarce resource of cattle enabled European colonisers to conquer and subdue Africa.

**SubQuestion No : 5**

**Q.5** Match List I with List II and choose the correct answer from the options provided :

List I	List II
A. Consumer goods	I. Crops
B. Plantation	II. Rinderpest
C. Plague	III. Minerals
D. Mines	IV. Wages

- (1) A-I, B-III, C-II, D-IV  
(2) A-II, B-IV, C-I, D-III  
(3) A-IV, B-I, C-II, D-III  
(4) A-III, B-IV, C-II, D-I

- Options** 1. 1  
2. 2  
3. 3  
4. 4

Question Type : **MCQ**  
Question ID : **8782702076**  
Option 1 ID : **8782708185**  
Option 2 ID : **8782708186**  
Option 3 ID : **8782708187**  
Option 4 ID : **8782708188**  
Status : **Answered**  
Chosen Option : **3**



### Comprehension:

Read the given passage and answer the questions that follow : (91-100)

In Africa, in the 1890s, a fast-spreading disease of cattle plague or rinderpest had a terrifying impact on people's livelihoods and the local economy. This is a good example of the widespread European imperial impact on colonised societies. It shows how, in this era of conquest, even a disease affecting cattle reshaped the lives and fortunes of thousands of people and their relations with the rest of the world.

Historically, Africa had abundant land and a relatively small population. For centuries, land and livestock sustained African livelihoods and people rarely worked for a wage. In late 19<sup>th</sup> Century Africa there were few consumer goods that wages could buy. If you had been an African possessing land and livestock — and there was plenty of both — you too would have seen little reason to work for a wage.

In the late 19<sup>th</sup> Century, Europeans were attracted to Africa due to its vast resources of land and minerals. Europeans came to Africa hoping to establish plantations and mines to produce crops and minerals for export to Europe. But there was an unexpected problem — a shortage of labour willing to work for wages.

Employers used many methods to recruit and retain labour. Heavy taxes were imposed, which could be paid only by working for wages on plantations and mines. Inheritance laws were changed so that peasants were displaced from land: only one member of a family was allowed to inherit land, as a result of which the others were pushed into the labour market. Mineworkers were also confined in compounds and not allowed to move about freely.

Then came rinderpest, a devastating cattle disease.

Rinderpest arrived in Africa in the late 1880s. It was carried by infected cattle imported from British Asia to feed the Italian soldiers invading Eritrea in East Africa. Entering Africa in the east, rinderpest moved west 'like forest fire', reaching Africa's Atlantic Coast in 1892. It reached the Cape (Africa's southernmost tip) five years later. Along the way, rinderpest killed 90 per cent of the cattle.

The loss of cattle destroyed African livelihoods. Planters, mine owners and colonial governments now successfully monopolised what scarce cattle resources remained to strengthen their power and to force Africans into the labour market. Control over the scarce resource of cattle enabled European colonisers to conquer and subdue Africa.

### SubQuestion No : 6

**Q.6** Choose the incorrect statement from the following :

- (1) European colonisers imposed heavy taxes on plantations and mines.
- (2) European colonisers brought the cattle plague into Africa.
- (3) European colonisers established plantations and mines to produce crops and minerals for export.
- (4) European colonisers changed the inheritance laws to push Africa into the labour market.

- Options**
1. 1
  2. 2
  3. 3
  4. 4

Question Type : **MCQ**

Question ID : **8782702075**

Option 1 ID : **8782708181**

Option 2 ID : **8782708182**

Option 3 ID : **8782708183**

Option 4 ID : **8782708184**

Status : **Answered**

Chosen Option : **1**

### Comprehension:

Read the given passage and answer the questions that follow : (91-100)

In Africa, in the 1890s, a fast-spreading disease of cattle plague or rinderpest had a terrifying impact on people's livelihoods and the local economy. This is a good example of the widespread European imperial impact on colonised societies. It shows how, in this era of conquest, even a disease affecting cattle reshaped the lives and fortunes of thousands of people and their relations with the rest of the world.

Historically, Africa had abundant land and a relatively small population. For centuries, land and livestock sustained African livelihoods and people rarely worked for a wage. In late 19<sup>th</sup> Century Africa there were few consumer goods that wages could buy. If you had been an African possessing land and livestock — and there was plenty of both — you too would have seen little reason to work for a wage.

In the late 19<sup>th</sup> Century, Europeans were attracted to Africa due to its vast resources of land and minerals. Europeans came to Africa hoping to establish plantations and mines to produce crops and minerals for export to Europe. But there was an unexpected problem — a shortage of labour willing to work for wages.

Employers used many methods to recruit and retain labour. Heavy taxes were imposed, which could be paid only by working for wages on plantations and mines. Inheritance laws were changed so that peasants were displaced from land: only one member of a family was allowed to inherit land, as a result of which the others were pushed into the labour market. Mineworkers were also confined in compounds and not allowed to move about freely.

Then came rinderpest, a devastating cattle disease.

Rinderpest arrived in Africa in the late 1880s. It was carried by infected cattle imported from British Asia to feed the Italian soldiers invading Eritrea in East Africa. Entering Africa in the east, rinderpest moved west 'like forest fire', reaching Africa's Atlantic Coast in 1892. It reached the Cape (Africa's southernmost tip) five years later. Along the way, rinderpest killed 90 per cent of the cattle.

The loss of cattle destroyed African livelihoods. Planters, mine owners and colonial governments now successfully monopolised what scarce cattle resources remained to strengthen their power and to force Africans into the labour market. Control over the scarce resource of cattle enabled European colonisers to conquer and subdue Africa.

### SubQuestion No : 7

Q.7 Which among the following words from the passage means :  
'to bring something or somebody under control'

- (1) labour
- (2) subdue
- (3) power
- (4) force

- Options
- 1. 1
  - 2. 2
  - 3. 3
  - 4. 4

Question Type : MCQ

Question ID : 8782702078

Option 1 ID : 8782708193

Option 2 ID : 8782708194

Option 3 ID : 8782708195

Option 4 ID : 8782708196

Status : Answered

Chosen Option : 2



### Comprehension:

Read the given passage and answer the questions that follow : (91-100)

In Africa, in the 1890s, a fast-spreading disease of cattle plague or rinderpest had a terrifying impact on people's livelihoods and the local economy. This is a good example of the widespread European imperial impact on colonised societies. It shows how, in this era of conquest, even a disease affecting cattle reshaped the lives and fortunes of thousands of people and their relations with the rest of the world.

Historically, Africa had abundant land and a relatively small population. For centuries, land and livestock sustained African livelihoods and people rarely worked for a wage. In late 19<sup>th</sup> Century Africa there were few consumer goods that wages could buy. If you had been an African possessing land and livestock — and there was plenty of both — you too would have seen little reason to work for a wage.

In the late 19<sup>th</sup> Century, Europeans were attracted to Africa due to its vast resources of land and minerals. Europeans came to Africa hoping to establish plantations and mines to produce crops and minerals for export to Europe. But there was an unexpected problem — a shortage of labour willing to work for wages.

Employers used many methods to recruit and retain labour. Heavy taxes were imposed, which could be paid only by working for wages on plantations and mines. Inheritance laws were changed so that peasants were displaced from land: only one member of a family was allowed to inherit land, as a result of which the others were pushed into the labour market. Mineworkers were also confined in compounds and not allowed to move about freely.

Then came rinderpest, a devastating cattle disease.

Rinderpest arrived in Africa in the late 1880s. It was carried by infected cattle imported from British Asia to feed the Italian soldiers invading Eritrea in East Africa. Entering Africa in the east, rinderpest moved west 'like forest fire', reaching Africa's Atlantic Coast in 1892. It reached the Cape (Africa's southernmost tip) five years later. Along the way, rinderpest killed 90 per cent of the cattle.

The loss of cattle destroyed African livelihoods. Planters, mine owners and colonial governments now successfully monopolised what scarce cattle resources remained to strengthen their power and to force Africans into the labour market. Control over the scarce resource of cattle enabled European colonisers to conquer and subdue Africa.

### SubQuestion No : 8

**Q.8** Which among the following words from the passage means :  
'a person who buys goods or services'

- (1) coloniser
- (2) planter
- (3) consumer
- (4) employer

- Options**
- 1. 1
  - 2. 2
  - 3. 3
  - 4. 4

Question Type : **MCQ**

Question ID : **8782702077**

Option 1 ID : **8782708189**

Option 2 ID : **8782708190**

Option 3 ID : **8782708191**

Option 4 ID : **8782708192**

Status : **Answered**

Chosen Option : **3**

### Comprehension:

Read the given passage and answer the questions that follow : (91-100)

In Africa, in the 1890s, a fast-spreading disease of cattle plague or rinderpest had a terrifying impact on people's livelihoods and the local economy. This is a good example of the widespread European imperial impact on colonised societies. It shows how, in this era of conquest, even a disease affecting cattle reshaped the lives and fortunes of thousands of people and their relations with the rest of the world.

Historically, Africa had abundant land and a relatively small population. For centuries, land and livestock sustained African livelihoods and people rarely worked for a wage. In late 19<sup>th</sup> Century Africa there were few consumer goods that wages could buy. If you had been an African possessing land and livestock — and there was plenty of both — you too would have seen little reason to work for a wage.

In the late 19<sup>th</sup> Century, Europeans were attracted to Africa due to its vast resources of land and minerals. Europeans came to Africa hoping to establish plantations and mines to produce crops and minerals for export to Europe. But there was an unexpected problem — a shortage of labour willing to work for wages.

Employers used many methods to recruit and retain labour. Heavy taxes were imposed, which could be paid only by working for wages on plantations and mines. Inheritance laws were changed so that peasants were displaced from land: only one member of a family was allowed to inherit land, as a result of which the others were pushed into the labour market. Mineworkers were also confined in compounds and not allowed to move about freely.

Then came rinderpest, a devastating cattle disease.

Rinderpest arrived in Africa in the late 1880s. It was carried by infected cattle imported from British Asia to feed the Italian soldiers invading Eritrea in East Africa. Entering Africa in the east, rinderpest moved west 'like forest fire', reaching Africa's Atlantic Coast in 1892. It reached the Cape (Africa's southernmost tip) five years later. Along the way, rinderpest killed 90 per cent of the cattle.

The loss of cattle destroyed African livelihoods. Planters, mine owners and colonial governments now successfully monopolised what scarce cattle resources remained to strengthen their power and to force Africans into the labour market. Control over the scarce resource of cattle enabled European colonisers to conquer and subdue Africa.

### SubQuestion No : 9

**Q.9** Choose the correct statement from the following :

- (1) Rinderpest arrived in Africa through infected Italian soldiers invading Eritrea in East Africa.
- (2) Rinderpest moved like forest fire from East Africa to Atlantic Coast in the 1880s.
- (3) Rinderpest gripped the whole of Africa in 1880s.
- (4) Rinderpest arrived in Africa in 1880s from British Asia.

- Options**
- 1. 1
  - 2. 2
  - 3. 3
  - 4. 4

Question Type : **MCQ**

Question ID : **8782702070**

Option 1 ID : **8782708161**

Option 2 ID : **8782708162**

Option 3 ID : **8782708163**

Option 4 ID : **8782708164**

Status : **Answered**

Chosen Option : **4**

### Comprehension:

Read the given passage and answer the questions that follow : (91-100)

In Africa, in the 1890s, a fast-spreading disease of cattle plague or rinderpest had a terrifying impact on people's livelihoods and the local economy. This is a good example of the widespread European imperial impact on colonised societies. It shows how, in this era of conquest, even a disease affecting cattle reshaped the lives and fortunes of thousands of people and their relations with the rest of the world.

Historically, Africa had abundant land and a relatively small population. For centuries, land and livestock sustained African livelihoods and people rarely worked for a wage. In late 19<sup>th</sup> Century Africa there were few consumer goods that wages could buy. If you had been an African possessing land and livestock — and there was plenty of both — you too would have seen little reason to work for a wage.

In the late 19<sup>th</sup> Century, Europeans were attracted to Africa due to its vast resources of land and minerals. Europeans came to Africa hoping to establish plantations and mines to produce crops and minerals for export to Europe. But there was an unexpected problem — a shortage of labour willing to work for wages.

Employers used many methods to recruit and retain labour. Heavy taxes were imposed, which could be paid only by working for wages on plantations and mines. Inheritance laws were changed so that peasants were displaced from land: only one member of a family was allowed to inherit land, as a result of which the others were pushed into the labour market. Mineworkers were also confined in compounds and not allowed to move about freely.

Then came rinderpest, a devastating cattle disease.

Rinderpest arrived in Africa in the late 1880s. It was carried by infected cattle imported from British Asia to feed the Italian soldiers invading Eritrea in East Africa. Entering Africa in the east, rinderpest moved west 'like forest fire', reaching Africa's Atlantic Coast in 1892. It reached the Cape (Africa's southernmost tip) five years later. Along the way, rinderpest killed 90 per cent of the cattle.

The loss of cattle destroyed African livelihoods. Planters, mine owners and colonial governments now successfully monopolised what scarce cattle resources remained to strengthen their power and to force Africans into the labour market. Control over the scarce resource of cattle enabled European colonisers to conquer and subdue Africa.

### SubQuestion No : 10

**Q.10** The Africans rarely worked for a wage because :

- (1) Africans had abundant land.
- (2) Africans had small population.
- (3) Africans didn't need consumer goods.
- (4) Africans had abundance of land and livestock.

**Options**

- 1. 1
- 2. 2
- 3. 3
- 4. 4

Question Type : **MCQ**

Question ID : **8782702072**

Option 1 ID : **8782708169**

Option 2 ID : **8782708170**

Option 3 ID : **8782708171**

Option 4 ID : **8782708172**

Status : **Answered**

Chosen Option : **4**



Q.11 Fill in the blank :  
I have not met him \_\_\_\_\_ the last month.

- (1) for
- (2) within
- (3) since
- (4) from

Options 1. 1  
2. 2  
3. 3  
4. 4

Question Type : MCQ  
Question ID : 8782702084  
Option 1 ID : 8782708217  
Option 2 ID : 8782708218  
Option 3 ID : 8782708219  
Option 4 ID : 8782708220  
Status : Answered  
Chosen Option : 3

Q.12 Spot the error :  
In 1637 Descartes / given the corpuscular model / of light and / derives Snell's law.

- A B C D
- (1) A and B
  - (2) B and C
  - (3) C and D
  - (4) B and D

Options 1. 1  
2. 2  
3. 3  
4. 4

Question Type : MCQ  
Question ID : 8782702087  
Option 1 ID : 8782708229  
Option 2 ID : 8782708230  
Option 3 ID : 8782708231  
Option 4 ID : 8782708232  
Status : Answered  
Chosen Option : 4



**Q.13** Choose the most appropriate phrase to fill in the blank :  
Suraj is in the habit of scattering his things \_\_\_\_\_ and then searching for them recklessly.

- (1) hither and thither
- (2) hither and tither
- (3) heether and theetre
- (4) hither and teether

**Options** 1. 1  
2. 2  
3. 3  
4. 4

Question Type : **MCQ**  
Question ID : **8782702088**  
Option 1 ID : **8782708233**  
Option 2 ID : **8782708234**  
Option 3 ID : **8782708235**  
Option 4 ID : **8782708236**  
Status : **Answered**  
Chosen Option : **2**

**Q.14** Change into the Passive Voice :  
Will I ever forget those horrible days?

- (1) Will those horrible days ever be forgotten by me?
- (2) Would I be able to forget those horrible days?
- (3) Would those horrible days ever be forgotten by me?
- (4) Could I ever forget those horrible days?

**Options** 1. 1  
2. 2  
3. 3  
4. 4

Question Type : **MCQ**  
Question ID : **8782702094**  
Option 1 ID : **8782708257**  
Option 2 ID : **8782708258**  
Option 3 ID : **8782708259**  
Option 4 ID : **8782708260**  
Status : **Answered**  
Chosen Option : **1**



Q.15 Change into the Passive Voice :

I am to finish this book.

- (1) This book will be finished by me.
- (2) This book will have been finished by me.
- (3) This book is to be finished by me.
- (4) This book was to be finished by me.

Options

- 1. 1
- 2. 2
- 3. 3
- 4. 4

Question Type : **MCQ**

Question ID : **8782702093**

Option 1 ID : **8782708253**

Option 2 ID : **8782708254**

Option 3 ID : **8782708255**

Option 4 ID : **8782708256**

Status : **Answered**

Chosen Option : **3**

Q.16 Change into Indirect Speech :

Father said to me, "Do you know the way to the residence of the doctor?"

- (1) Father asked me if I know the way to the residence of the doctor.
- (2) Father asked me if I knew the way to the residence of the doctor.
- (3) Father asked me whether I knew the way to the residence of the doctor?
- (4) Father asked me if I know the way to the residence of the doctor?

Options

- 1. 1
- 2. 2
- 3. 3
- 4. 4

Question Type : **MCQ**

Question ID : **8782702098**

Option 1 ID : **8782708273**

Option 2 ID : **8782708274**

Option 3 ID : **8782708275**

Option 4 ID : **8782708276**

Status : **Answered**

Chosen Option : **3**



Q.17 Choose the most appropriate phrase to fill in the blank :  
Clearing the UPSC examination is \_\_\_\_\_.

- (1) downtrodden task
- (2) hilly task
- (3) an uphill task
- (4) an enormous task

Options 1. 1  
2. 2  
3. 3  
4. 4

Question Type : **MCQ**  
Question ID : 8782702089  
Option 1 ID : 8782708237  
Option 2 ID : 8782708238  
Option 3 ID : 8782708239  
Option 4 ID : 8782708240  
Status : **Answered**  
Chosen Option : 3

Q.18 Fill in the blank by choosing the most appropriate option from the following :  
Most people living in cities depend on others for supplies \_\_\_\_\_ food.

- (1) about
- (2) for
- (3) of
- (4) in

Options 1. 1  
2. 2  
3. 3  
4. 4

Question Type : **MCQ**  
Question ID : 8782702082  
Option 1 ID : 8782708209  
Option 2 ID : 8782708210  
Option 3 ID : 8782708211  
Option 4 ID : 8782708212  
Status : **Answered**  
Chosen Option : 3



Q.19 Change into Indirect Speech :

Esha said today, "I am leaving Pune tonight".

- (1) Esha said that day that she was leaving Pune that night.
- (2) Esha said today that she was leaving Pune tonight.
- (3) Esha said today that she is leaving Pune that night.
- (4) Esha said that day that she is leaving Pune tonight.

Options 1. 1  
2. 2  
3. 3  
4. 4

Question Type : MCQ  
Question ID : 8782702099  
Option 1 ID : 8782708277  
Option 2 ID : 8782708278  
Option 3 ID : 8782708279  
Option 4 ID : 8782708280  
Status : Answered  
Chosen Option : 1

Q.20 Change into Indirect Speech :

Mother said to me, "Take the torch with you when you go out".

- (1) Mother ordered me to take the torch with me when I go out.
- (2) Mother told me to take the torch with me when I got out.
- (3) Mother advised me to take the torch with me when I went out.
- (4) Mother asked me to take the torch with me when going out.

Options 1. 1  
2. 2  
3. 3  
4. 4

Question Type : MCQ  
Question ID : 8782702097  
Option 1 ID : 8782708269  
Option 2 ID : 8782708270  
Option 3 ID : 8782708271  
Option 4 ID : 8782708272  
Status : Answered  
Chosen Option : 3





Q.21 Change into the Passive Voice :

Who repaired this broken pen?

- (1) By who was this broken pen repaired?
- (2) By whom was this broken pen repaired?
- (3) By who had this pen been repaired?
- (4) By whom had been this pen repaired?

Options 1. 1

2. 2

3. 3

4. 4

Question Type : MCQ

Question ID : 8782702090

Option 1 ID : 8782708241

Option 2 ID : 8782708242

Option 3 ID : 8782708243

Option 4 ID : 8782708244

Status : Answered

Chosen Option : 2

Q.22 Change into Indirect Speech :

Shaunaka said, "We cannot spare anything for you".

- (1) Shaunaka said that they could not spare anything for him.
- (2) Shaunaka told him that they cannot spare anything for you.
- (3) Shaunaka exclaimed that they cannot spare anything.
- (4) Shaunaka said to him that nothing can be spare.

Options 1. 1

2. 2

3. 3

4. 4

Question Type : MCQ

Question ID : 8782702095

Option 1 ID : 8782708261

Option 2 ID : 8782708262

Option 3 ID : 8782708263

Option 4 ID : 8782708264

Status : Answered

Chosen Option : 1



**Q.23** Rearrange the following sentences in a logical order to form a coherent paragraph:

- A. One way is to determine the poverty line by the monetary value of the minimum calorie intake.
- B. The calorie intake was estimated at 2,400 calories for a rural person, and 2,100 for a person in the urban area.
- C. There are many ways of measuring the poverty line.
- D. Based on this calorie intake reading, the poverty line in 2011-12 was defined for rural areas as consumption worth ₹816 per person per month and for urban areas as ₹1,000.

- (1) ABCD
- (2) DCBA
- (3) CABD
- (4) BADC

**Options** 1. 1

- 2. 2
- 3. 3
- 4. 4

Question Type : **MCQ**

Question ID : **8782702085**

Option 1 ID : **8782708221**

Option 2 ID : **8782708222**

Option 3 ID : **8782708223**

Option 4 ID : **8782708224**

Status : **Answered**

Chosen Option : **3**

**Q.24** Change into the Passive Voice :

We execute all instructions correctly.

- (1) All instructions have been executed correctly.
- (2) All instructions had been executed correctly.
- (3) All instructions were executed correctly.
- (4) All instructions are executed correctly.

**Options** 1. 1

- 2. 2
- 3. 3
- 4. 4

Question Type : **MCQ**

Question ID : **8782702092**

Option 1 ID : **8782708249**

Option 2 ID : **8782708250**

Option 3 ID : **8782708251**

Option 4 ID : **8782708252**

Status : **Answered**

Chosen Option : **4**

**Q.25** Choose the most appropriate idiom to fill in the blank :

She has a few tricks \_\_\_\_\_ , and will reveal the truth at the right time.

- (1) up her sleeve
- (2) in her sleeve
- (3) under her sleeve
- (4) upon her sleeve

**Options** 1. 1

2. 2

3. 3

4. 4

Question Type : **MCQ**

Question ID : **8782702081**

Option 1 ID : **8782708205**

Option 2 ID : **8782708206**

Option 3 ID : **8782708207**

Option 4 ID : **8782708208**

Status : **Answered**

Chosen Option : 1

**Q.26** Change into the Passive Voice :

Love your country.

- (1) Your country should be loved.
- (2) Your country has to be loved.
- (3) Your country needs to be loved.
- (4) Your country could be loved.

**Options** 1. 1

2. 2

3. 3

4. 4

Question Type : **MCQ**

Question ID : **8782702091**

Option 1 ID : **8782708245**

Option 2 ID : **8782708246**

Option 3 ID : **8782708247**

Option 4 ID : **8782708248**

Status : **Answered**

Chosen Option : 1



**Q.27** Fill in the blanks :  
Tamil Nadu is the first state in India which \_\_\_\_\_ rooftop rainwater harvesting structures compulsory for all houses \_\_\_\_\_ the state.

- (1) have made, between
- (2) had made, along
- (3) have make, within
- (4) has made, across

**Options** 1. 1  
2. 2  
3. 3  
4. 4

Question Type : **MCQ**  
Question ID : **8782702083**  
Option 1 ID : **8782708213**  
Option 2 ID : **8782708214**  
Option 3 ID : **8782708215**  
Option 4 ID : **8782708216**  
Status : **Answered**  
Chosen Option : **4**

**Q.28** Choose the most appropriate idiom to fill in the blank :  
Their faults are \_\_\_\_\_ by their masters.

- (1) winked at
- (2) winked
- (3) winked after
- (4) winked out

**Options** 1. 1  
2. 2  
3. 3  
4. 4

Question Type : **MCQ**  
Question ID : **8782702080**  
Option 1 ID : **8782708201**  
Option 2 ID : **8782708202**  
Option 3 ID : **8782708203**  
Option 4 ID : **8782708204**  
Status : **Answered**  
Chosen Option : **4**



Q.29 Change into Indirect Speech :  
Buddha said to Kriti, "Bring me a handful of mustard seeds".

- (1) Buddha said to Kriti to bring a handful of mustard seeds.
- (2) Buddha directed Kriti to bring him a handful of mustard seeds.
- (3) Buddha requested for mustard seeds to be brought.
- (4) Buddha told Kriti bring mustard seeds.

Options 1. 1  
2. 2  
3. 3  
4. 4

Question Type : MCQ  
Question ID : 8782702096  
Option 1 ID : 8782708265  
Option 2 ID : 8782708266  
Option 3 ID : 8782708267  
Option 4 ID : 8782708268  
Status : Answered  
Chosen Option : 2

Q.30 Spot the error :  
The rainbow was / an example of / the dispersion of sunlight / in the water droplets of rain.  
A B C D

- (1) A and B
- (2) B and D
- (3) A and D
- (4) B and C

Options 1. 1  
2. 2  
3. 3  
4. 4

Question Type : MCQ  
Question ID : 8782702086  
Option 1 ID : 8782708225  
Option 2 ID : 8782708226  
Option 3 ID : 8782708227  
Option 4 ID : 8782708228  
Status : Answered  
Chosen Option : 3

**Comprehension:**

Fill in the blanks with the appropriate word given below :

Sahib, your countrymen came (i)\_\_\_\_\_ this country and drove out our king. You sent (ii)\_\_\_\_\_ officers around the districts to (iii)\_\_\_\_\_ the title deeds of the estates. In one blow you took from me lands which from times (iv)\_\_\_\_\_ had been in my family. And now you complain that suddenly, (v)\_\_\_\_\_ has fallen upon you.

**SubQuestion No : 31**

- Q.31** (v)
- (1) misapprehend
  - (2) miscarry
  - (3) misfortune
  - (4) misfire

- Options**
- 1. 1
  - 2. 2
  - 3. 3
  - 4. 4

Question Type : **MCQ**  
Question ID : **8782702105**  
Option 1 ID : **8782708297**  
Option 2 ID : **8782708298**  
Option 3 ID : **8782708299**  
Option 4 ID : **8782708300**  
Status : **Answered**  
Chosen Option : **3**

**Comprehension:**

Fill in the blanks with the appropriate word given below :

Sahib, your countrymen came (i)\_\_\_\_\_ this country and drove out our king. You sent (ii)\_\_\_\_\_ officers around the districts to (iii)\_\_\_\_\_ the title deeds of the estates. In one blow you took from me lands which from times (iv)\_\_\_\_\_ had been in my family. And now you complain that suddenly, (v)\_\_\_\_\_ has fallen upon you.

**SubQuestion No : 32**

- Q.32** (iv)
- (1) immemorial
  - (2) immovable
  - (3) immaterial
  - (4) immanent

- Options**
- 1. 1
  - 2. 2
  - 3. 3
  - 4. 4

Question Type : **MCQ**  
Question ID : **8782702104**  
Option 1 ID : **8782708293**  
Option 2 ID : **8782708294**  
Option 3 ID : **8782708295**  
Option 4 ID : **8782708296**  
Status : **Answered**  
Chosen Option : **2**



**Comprehension:**

Fill in the blanks with the appropriate word given below :

Sahib, your countrymen came (i)\_\_\_\_\_ this country and drove out our king. You sent (ii)\_\_\_\_\_ officers around the districts to (iii)\_\_\_\_\_ the title deeds of the estates. In one blow you took from me lands which from times (iv)\_\_\_\_\_ had been in my family. And now you complain that suddenly, (v)\_\_\_\_\_ has fallen upon you.

**SubQuestion No : 33**

**Q.33** (iii)

- (1) excerpt
- (2) exchange
- (3) exclude
- (4) examine

**Options** 1. 1

- 2. 2
- 3. 3
- 4. 4

Question Type : **MCQ**

Question ID : **8782702103**

Option 1 ID : **8782708289**

Option 2 ID : **8782708290**

Option 3 ID : **8782708291**

Option 4 ID : **8782708292**

Status : **Answered**

Chosen Option : **4**

<https://t.me/UPDATXAMS>

**Comprehension:**

Fill in the blanks with the appropriate word given below :

Sahib, your countrymen came (i)\_\_\_\_\_ this country and drove out our king. You sent (ii)\_\_\_\_\_ officers around the districts to (iii)\_\_\_\_\_ the title deeds of the estates. In one blow you took from me lands which from times (iv)\_\_\_\_\_ had been in my family. And now you complain that suddenly, (v)\_\_\_\_\_ has fallen upon you.

**SubQuestion No : 34**

**Q.34** (i)

- (1) to
- (2) into
- (3) in
- (4) at

**Options** 1. 1

- 2. 2
- 3. 3
- 4. 4

Question Type : **MCQ**

Question ID : **8782702101**

Option 1 ID : **8782708281**

Option 2 ID : **8782708282**

Option 3 ID : **8782708283**

Option 4 ID : **8782708284**

Status : **Answered**

Chosen Option : **2**



**Comprehension:**

Fill in the blanks with the appropriate word given below :

Sahib, your countrymen came (i)\_\_\_\_\_ this country and drove out our king. You sent (ii)\_\_\_\_\_ officers around the districts to (iii)\_\_\_\_\_ the title deeds of the estates. In one blow you took from me lands which from times (iv)\_\_\_\_\_ had been in my family. And now you complain that suddenly, (v)\_\_\_\_\_ has fallen upon you.

**SubQuestion No : 35**

- Q.35** (ii)
- (1) your
  - (2) their
  - (3) those
  - (4) that

- Options**
- 1. 1
  - 2. 2
  - 3. 3
  - 4. 4

Question Type : **MCQ**

Question ID : **8782702102**

Option 1 ID : **8782708285**

Option 2 ID : **8782708286**

Option 3 ID : **8782708287**

Option 4 ID : **8782708288**

Status : **Answered**

Chosen Option : **1**

**Q.36** Which part of the following sentence has an error ?

"I don't like / such bright colours / and nor she does." / he said to Ram.

A B C D

- (1) A
- (2) B
- (3) C
- (4) D

- Options**
- 1. 1
  - 2. 2
  - 3. 3
  - 4. 4

Question Type : **MCQ**

Question ID : **8782702116**

Option 1 ID : **8782708341**

Option 2 ID : **8782708342**

Option 3 ID : **8782708343**

Option 4 ID : **8782708344**

Status : **Answered**

Chosen Option : **3**



**Q.37** Choose the appropriate option for the underlined part in the following sentence :

If I was you I would not sign the document.

- (1) If I had been you
- (2) If I were you
- (3) If I have been you
- (4) No improvement

**Options** 1. 1

2. 2

3. 3

4. 4

Question Type : **MCQ**

Question ID : **8782702120**

Option 1 ID : **8782708357**

Option 2 ID : **8782708358**

Option 3 ID : **8782708359**

Option 4 ID : **8782708360**

Status : **Answered**

Chosen Option : **2**

**Q.38** Choose the most appropriate word from the given options to fill in the blank.

Ram finished the task \_\_\_\_\_ than Shyam.

- (1) last
- (2) later
- (3) latest
- (4) latter

**Options** 1. 1

2. 2

3. 3

4. 4

Question Type : **MCQ**

Question ID : **8782702117**

Option 1 ID : **8782708345**

Option 2 ID : **8782708346**

Option 3 ID : **8782708347**

Option 4 ID : **8782708348**

Status : **Answered**

Chosen Option : **4**



Q.39 Choose the correctly spelt word from the following option :

- (1) Coalition
- (2) Coelition
- (3) Coaelision
- (4) Coelicion

Options 1. 1  
2. 2  
3. 3  
4. 4

Question Type : MCQ  
Question ID : 8782702113  
Option 1 ID : 8782708329  
Option 2 ID : 8782708330  
Option 3 ID : 8782708331  
Option 4 ID : 8782708332  
Status : Answered  
Chosen Option : 1

Q.40 Choose the word from the following that is opposite in meaning to :  
'timid'

- (1) venturesome
- (2) domestic
- (3) definite
- (4) docile

Options 1. 1  
2. 2  
3. 3  
4. 4

Question Type : MCQ  
Question ID : 8782702109  
Option 1 ID : 8782708313  
Option 2 ID : 8782708314  
Option 3 ID : 8782708315  
Option 4 ID : 8782708316  
Status : Answered  
Chosen Option : 1



Q.41 Choose the word similar in meaning to the given word :

'blitz'

(1) happiness

(2) fall

(3) attack

(4) news

Options 1. 1

2. 2

3. 3

4. 4

Question Type : **MCQ**

Question ID : 8782702108

Option 1 ID : 8782708309

Option 2 ID : 8782708310

Option 3 ID : 8782708311

Option 4 ID : 8782708312

Status : **Answered**

Chosen Option : 3

Q.42 Complete the following sentence by choosing the most appropriate question tag :

The traffic lights are not working properly, \_\_\_\_\_

(1) are they ?

(2) do they ?

(3) don't they ?

(4) aren't they ?

Options 1. 1

2. 2

3. 3

4. 4

Question Type : **MCQ**

Question ID : 8782702112

Option 1 ID : 8782708325

Option 2 ID : 8782708326

Option 3 ID : 8782708327

Option 4 ID : 8782708328

Status : **Answered**

Chosen Option : 1



**Q.43** Complete the following sentence by choosing the most appropriate question tag :

You will do as she says, \_\_\_\_\_ ?

- (1) didn't you
- (2) won't you
- (3) needn't you
- (4) shan't you

**Options** 1. 1  
2. 2  
3. 3  
4. 4

Question Type : **MCQ**

Question ID : 8782702111

Option 1 ID : 8782708321

Option 2 ID : 8782708322

Option 3 ID : 8782708323

Option 4 ID : 8782708324

Status : **Answered**

Chosen Option : 2

**Q.44** Choose from the following options the word that is opposite in meaning to :

'affluence'

- (1) native
- (2) approve
- (3) poverty
- (4) timid

**Options** 1. 1  
2. 2  
3. 3  
4. 4

Question Type : **MCQ**

Question ID : 8782702110

Option 1 ID : 8782708317

Option 2 ID : 8782708318

Option 3 ID : 8782708319

Option 4 ID : 8782708320

Status : **Answered**

Chosen Option : 3



Q.45 Choose the most appropriate synonym from the given options :

'urbane'

- (1) stray
- (2) suave
- (3) peerless
- (4) novice

Options 1. 1  
2. 2  
3. 3  
4. 4

Question Type : **MCQ**  
Question ID : **8782702107**  
Option 1 ID : **8782708305**  
Option 2 ID : **8782708306**  
Option 3 ID : **8782708307**  
Option 4 ID : **8782708308**  
Status : **Answered**  
Chosen Option : 2

Q.46 Choose the most appropriate antonym from the given options :

'baffle'

- (1) enlighten
- (2) humanity
- (3) confound
- (4) reproach

Options 1. 1  
2. 2  
3. 3  
4. 4

Question Type : **MCQ**  
Question ID : **8782702106**  
Option 1 ID : **8782708301**  
Option 2 ID : **8782708302**  
Option 3 ID : **8782708303**  
Option 4 ID : **8782708304**  
Status : **Answered**  
Chosen Option : 1

**Q.47** Choose the most appropriate word to fill in the blank :

We are offering solutions \_\_\_\_\_ a price that everyone can afford.

(1) at

(2) for

(3) in

(4) by

**Options** 1. 1

2. 2

3. 3

4. 4

Question Type : **MCQ**

Question ID : **8782702119**

Option 1 ID : **8782708353**

Option 2 ID : **8782708354**

Option 3 ID : **8782708355**

Option 4 ID : **8782708356**

Status : **Answered**

Chosen Option : **1**

**Q.48** Choose the option which does not mean the same as the word given below :

'insanity'

(1) paranoia

(2) delirium

(3) hysteria

(4) insolence

**Options** 1. 1

2. 2

3. 3

4. 4

Question Type : **MCQ**

Question ID : **8782702115**

Option 1 ID : **8782708337**

Option 2 ID : **8782708338**

Option 3 ID : **8782708339**

Option 4 ID : **8782708340**

Status : **Answered**

Chosen Option : **2**



**Q.49** Which of the following best represents the underlined expression ?  
During his visit to France, the Prime Minister had a tête-à-tête with his counterpart.

- (1) tea served on a special occasion
- (2) tit for tat
- (3) a private conversation
- (4) talk on telephone

**Options** 1. 1  
2. 2  
3. 3  
4. 4

Question Type : **MCQ**  
Question ID : 8782702114  
Option 1 ID : 8782708333  
Option 2 ID : 8782708334  
Option 3 ID : 8782708335  
Option 4 ID : 8782708336  
Status : **Answered**  
Chosen Option : 3

**Q.50** Choose the correct option from the following to fill in the blank :  
Raja was late \_\_\_\_\_ to the traffic condition following incessant rain.

- (1) apropos
- (2) because
- (3) in
- (4) due

**Options** 1. 1  
2. 2  
3. 3  
4. 4

Question Type : **MCQ**  
Question ID : 8782702118  
Option 1 ID : 8782708349  
Option 2 ID : 8782708350  
Option 3 ID : 8782708351  
Option 4 ID : 8782708352  
Status : **Answered**  
Chosen Option : 4

Section : **Computer Literacy**



Q.1 The binary equivalent of the numbers  $(736.26)_8$  and  $(ABC.DE)_{16}$  are :

- (1) 111011110.010110 and 10101111.11001110, respectively
- (2) 101010111100.11011110 and 101011110.010110, respectively
- (3) 111011110.010110 and 101010111100.11011110, respectively
- (4) 111100110.110001 and 11011110.101010111100, respectively

- Options
- 1. 1
  - 2. 2
  - 3. 3
  - 4. 4

Question Type : MCQ  
Question ID : 8782702127  
Option 1 ID : 8782708385  
Option 2 ID : 8782708386  
Option 3 ID : 8782708387  
Option 4 ID : 8782708388  
Status : Answered  
Chosen Option : 3

Q.2 Match List I with List II.

List I (Theorem / Law)	List II (Boolean algebra)
A. Absorption Law	I. $X + X = X$
B. Commutative Law	II. $X.Y = Y.X$
C. De Morgan's Theorem	III. $X + XY = X$
D. Idempotence Law	IV. $(X+Y)' = X'Y'$

Match Boolean algebra expression to theorem/law of Boolean algebra.  
Choose the correct answer from the options given below :

- (1) A-II, B-I, C-IV, D-III
- (2) A-IV, B-III, C-II, D-I
- (3) A-III, B-II, C-IV, D-I
- (4) A-IV, B-I, C-II, D-III

- Options
- 1. 1
  - 2. 2
  - 3. 3
  - 4. 4

Question Type : MCQ  
Question ID : 8782702125  
Option 1 ID : 8782708377  
Option 2 ID : 8782708378  
Option 3 ID : 8782708379  
Option 4 ID : 8782708380  
Status : Answered  
Chosen Option : 3

**Q.3** Which one of the following statements is true in the context of operating systems ?

- (1) Context switching is a process manager which handles the removal of running programs from the CPU and the selection of new process.
- (2) Non-preemptive is a type of scheduling in which a process terminates or switches from a running state to a waiting state.
- (3) Paging corresponds to the index number of a segment.
- (4) Round Robin scheduling algorithm uses non-preemptive scheduling.

**Options** 1. 1  
2. 2  
3. 3  
4. 4

Question Type : **MCQ**  
Question ID : **8782702126**  
Option 1 ID : **8782708381**  
Option 2 ID : **8782708382**  
Option 3 ID : **8782708383**  
Option 4 ID : **8782708384**  
Status : **Not Answered**  
Chosen Option : --

**Q.4** Identify the statements which are false in the context of OSI model for computer networks.

- A. Transport layer works between network and session layer.
- B. Presentation layer works between session layer and network layer.
- C. Data link layer works between physical layer and network layer.
- D. Application layer works between session layer and presentation layer.
- E. Network layer works between data link layer and transport layer.

Choose the most appropriate answer from the options given below :

- (1) A and B only
- (2) B and D only
- (3) C and D only
- (4) D and E only

**Options** 1. 1  
2. 2  
3. 3  
4. 4

Question Type : **MCQ**  
Question ID : **8782702121**  
Option 1 ID : **8782708361**  
Option 2 ID : **8782708362**  
Option 3 ID : **8782708363**  
Option 4 ID : **8782708364**  
Status : **Answered**  
Chosen Option : **2**



**Q.5** Which of the following option is NOT present in the Mail Merge facility of MS-Word?

- (1) Envelopes
- (2) Letters
- (3) Labels
- (4) Webpage

**Options** 1. 1

- 2. 2
- 3. 3
- 4. 4

Question Type : **MCQ**

Question ID : **8782702129**

Option 1 ID : **8782708393**

Option 2 ID : **8782708394**

Option 3 ID : **8782708395**

Option 4 ID : **8782708396**

Status : **Answered**

Chosen Option : 1

**Q.6** 'Response Time' is a measure of the performance and efficiency of an operating system. It is defined as :

- (1) the interval of time between the submission of command (job) and the beginning of the first response.
- (2) the interval of time between the submission of command (job) and the completion of job.
- (3) the amount of work completed per unit time.
- (4) the amount of time a job is waiting to get CPU time.

**Options** 1. 1

- 2. 2
- 3. 3
- 4. 4

Question Type : **MCQ**

Question ID : **8782702124**

Option 1 ID : **8782708373**

Option 2 ID : **8782708374**

Option 3 ID : **8782708375**

Option 4 ID : **8782708376**

Status : **Answered**

Chosen Option : 1

**Q.7** Match List I with List II.

List I (Operating System functions)	List II (Description)
A. Process management	I. Protect resources and information from unauthorized access.
B. Memory management	II. Deals with storing data in files and folders.
C. File management	III. Deals with allocation of processes to the CPU.
D. Security management	IV. Takes care of memory in use, free memory, etc.

Choose the correct answer from the options given below :

- (1) A-III, B-IV, C-I, D-II
- (2) A-III, B-IV, C-II, D-I
- (3) A-IV, B-III, C-I, D-II
- (4) A-IV, B-III, C-II, D-I

- Options**
- 1. 1
  - 2. 2
  - 3. 3
  - 4. 4

Question Type : **MCQ**  
Question ID : **8782702130**  
Option 1 ID : **8782708397**  
Option 2 ID : **8782708398**  
Option 3 ID : **8782708399**  
Option 4 ID : **8782708400**  
Status : **Answered**  
Chosen Option : **4**

**Q.8** Which of the following statement(s) is/are FALSE in the context of a word processor ?

- A. It is a computer program that allows us to create, edit and produce text documents such as letters.
- B. MS Excel is a word processor created by Microsoft.
- C. WordStar was one of the early word processor programs.

Choose the most appropriate answer from the options given below :

- (1) A and B only
- (2) B and C only
- (3) B only
- (4) C only

- Options**
- 1. 1
  - 2. 2
  - 3. 3
  - 4. 4

Question Type : **MCQ**  
Question ID : **8782702123**  
Option 1 ID : **8782708369**  
Option 2 ID : **8782708370**  
Option 3 ID : **8782708371**  
Option 4 ID : **8782708372**  
Status : **Answered**  
Chosen Option : **4**

**Q.9** Which of the following statements are false in the context of a computer ?

- A. The size of the register is also called word size and determines the amount of data with which the computer can work at one time.
- B. System clock sets the pace for the CPU by using a vibrating quartz crystal.
- C. The CPU accesses each location in memory by using a buffer register called the memory content register.
- D. The width of the data bus determines how many bits can be transmitted at a time between the CPU and the Arithmetic Logic Unit (ALU).
- E. Before the CPU can execute an instruction, the Control Unit must retrieve a command or data from the computer memory.

Choose the most appropriate answer from the options given below :

- (1) A and B only
- (2) A and C only
- (3) B and E only
- (4) C and D only

**Options** 1. 1

2. 2

3. 3

4. 4

Question Type : **MCQ**

Question ID : **8782702128**

Option 1 ID : **8782708389**

Option 2 ID : **8782708390**

Option 3 ID : **8782708391**

Option 4 ID : **8782708392**

Status : **Not Answered**

Chosen Option : --

**Q.10** The difference between a web browser and an email client is :

- (1) A web browser is a software application, while an email client is a web service.
- (2) A web browser is used to view web pages, while an email client is used to send and receive emails.
- (3) A web browser is more secure than an email client.
- (4) There is no difference between a web browser and an email client.

**Options** 1. 1

2. 2

3. 3

4. 4

Question Type : **MCQ**

Question ID : **8782702122**

Option 1 ID : **8782708365**

Option 2 ID : **8782708366**

Option 3 ID : **8782708367**

Option 4 ID : **8782708368**

Status : **Answered**

Chosen Option : **2**

