



# Teachingninja.in



**Latest Govt Job updates**



**Private Job updates**



**Free Mock tests available**

**Visit - [teachingninja.in](https://teachingninja.in)**



Teachingninja.in

# **EPFO SSA Stage I**

**Previous Year Paper**  
**21 Aug, 2023 Shift 1**




# EPFO SSA EXAM - AUGUST 2023

Application No	
Candidate Name	
Roll No	
Test Date	21/08/2023
Test Time	9:00 AM - 11:30 AM
Subject	Social Security Assistant Stage I Examination

Section : General Aptitude

Q.1 Find the number of parallelograms in the following figure :



- (1) 12
- (2) 11
- (3) 15
- (4) 16

- Options
- 1. 1
  - 2. 2
  - 3. 3
  - 4. 4

Question Type : MCQ  
Question ID : 8782703212  
Option 1 ID : 87827012669  
Option 2 ID : 87827012670  
Option 3 ID : 87827012671  
Option 4 ID : 87827012672  
Status : Answered  
Chosen Option : 1

**Q.2** The Six faces of a cube are painted black, brown, green, red, pink and blue. Red is opposite to black. Green is between red and black, Blue is adjacent to pink, brown is adjacent to blue. Red is at the bottom.

Which of the following statement is correct ?

- (1) Brown and green are opposite
- (2) Black is between pink and blue
- (3) Blue is between pink and brown
- (4) Brown is between pink and blue

**Options** 1. 1  
2. 2  
3. 3  
4. 4

Question Type : **MCQ**  
Question ID : **8782703195**  
Option 1 ID : **87827012601**  
Option 2 ID : **87827012602**  
Option 3 ID : **87827012603**  
Option 4 ID : **87827012604**  
Status : **Answered**  
Chosen Option : 1

**Q.3** Each of the six friends A, B, C, D, E and F are working in an office and handle different number of projects in a month. A handles the second lowest number of projects. C handles more projects than D and E but less than B. B did not handle the maximum number of projects. E did not handle the minimum number of projects. The one who handles the third highest number of projects handles 31 projects. D handled 13 projects.

Which of the following is true regarding the number of projects handled by F ?

- (1) Only B handled more number of projects than F
- (2) No one handles more projects than F
- (3) The difference between projects handled by F and D is 18
- (4) F handled more number of projects than only three people

**Options** 1. 1  
2. 2  
3. 3  
4. 4

Question Type : **MCQ**  
Question ID : **8782703197**  
Option 1 ID : **87827012609**  
Option 2 ID : **87827012610**  
Option 3 ID : **87827012611**  
Option 4 ID : **87827012612**  
Status : **Answered**  
Chosen Option : 2



**Q.4** In a certain Code language '786' means 'people are late' '854' means 'people love others' and '483' means 'love all people'. Then how will 'All are late' be written in this language :

- (1) 384
- (2) 673
- (3) 365
- (4) 465

**Options** 1. 1  
2. 2  
3. 3  
4. 4

Question Type : **MCQ**  
Question ID : **8782703218**  
Option 1 ID : **87827012693**  
Option 2 ID : **87827012694**  
Option 3 ID : **87827012695**  
Option 4 ID : **87827012696**  
Status : **Answered**  
Chosen Option : **3**

**Q.5** If  $\alpha$  is 'greater than',  $\beta$  is 'less than';  $r$  is 'not greater than';  $\delta$  is 'not less than' and  $\ominus$  is 'equal to'.  
If  $3 A \alpha B$  and  $3 B \alpha 2 C$  then, which of the following is true ?

- (1)  $3 A \delta C$
- (2)  $4 A \alpha C$
- (3)  $2 A \ominus C$
- (4)  $5 A \alpha C$

**Options** 1. 1  
2. 2  
3. 3  
4. 4

Question Type : **MCQ**  
Question ID : **8782703200**  
Option 1 ID : **87827012621**  
Option 2 ID : **87827012622**  
Option 3 ID : **87827012623**  
Option 4 ID : **87827012624**  
Status : **Answered**  
Chosen Option : **4**

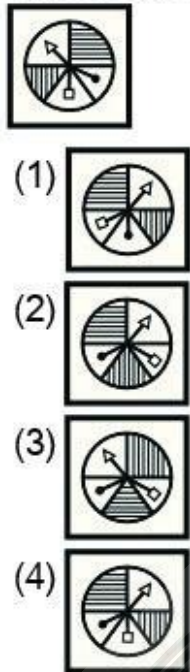
**Q.6** One evening before sunset two friends Sujit and Mohan were talking to each other face to face. If Mohan's shadow was exactly to his right side, which direction was Sujit facing ?

- (1) South
- (2) East
- (3) West
- (4) North

**Options** 1. 1  
2. 2  
3. 3  
4. 4

Question Type : **MCQ**  
Question ID : **8782703216**  
Option 1 ID : **87827012685**  
Option 2 ID : **87827012686**  
Option 3 ID : **87827012687**  
Option 4 ID : **87827012688**  
Status : **Answered**  
Chosen Option : **1**

**Q.7** Choose the correct mirror image of the given figure :



- (1)
- (2)
- (3)
- (4)

**Options** 1. 1  
2. 2  
3. 3  
4. 4

Question Type : **MCQ**  
Question ID : **8782703213**  
Option 1 ID : **87827012673**  
Option 2 ID : **87827012674**  
Option 3 ID : **87827012675**  
Option 4 ID : **87827012676**  
Status : **Answered**  
Chosen Option : **4**

**Q.8** P, Q, R and S live together in a house. P lives with his/her parents. Q lives with at least 3 persons younger than him/her. S lives with his mother and is older than at least 2 persons living with him. R lives with his (or her) son and is not older than S.  
How is Q related to P ?

- (1) Mother
- (2) Father
- (3) Grandmother
- (4) Brother

**Options** 1. 1  
2. 2  
3. 3  
4. 4

Question Type : **MCQ**  
Question ID : **8782703217**  
Option 1 ID : **87827012689**  
Option 2 ID : **87827012690**  
Option 3 ID : **87827012691**  
Option 4 ID : **87827012692**  
Status : **Answered**  
Chosen Option : **3**

**Q.9** Find the missing term in the following series :  
1, 2, 6, 21, 88, ?, 2676

- (1) 445
- (2) 519
- (3) 832
- (4) 786

**Options** 1. 1  
2. 2  
3. 3  
4. 4

Question Type : **MCQ**  
Question ID : **8782703220**  
Option 1 ID : **87827012701**  
Option 2 ID : **87827012702**  
Option 3 ID : **87827012703**  
Option 4 ID : **87827012704**  
Status : **Answered**  
Chosen Option : **1**



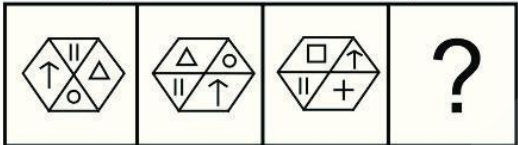
**Q.10** How many such pairs of digits are there in the number 542197638 each of which has as many digits between them in the number as when they are arranged in descending order ?

- (1) Six
- (2) Four
- (3) Two
- (4) Seven

**Options** 1. 1  
2. 2  
3. 3  
4. 4

Question Type : **MCQ**  
Question ID : 8782703224  
Option 1 ID : 87827012717  
Option 2 ID : 87827012718  
Option 3 ID : 87827012719  
Option 4 ID : 87827012720  
Status : **Answered**  
Chosen Option : 4

**Q.11** The first two figures are related in a certain way. Replace the question mark (?) so that the selected figure is related in the similar way with the third figure.

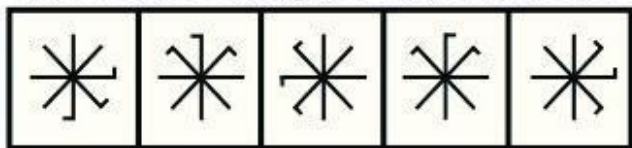


- (1)
- (2)
- (3)
- (4)

**Options** 1. 1  
2. 2  
3. 3  
4. 4

Question Type : **MCQ**  
Question ID : 8782703206  
Option 1 ID : 87827012645  
Option 2 ID : 87827012646  
Option 3 ID : 87827012647  
Option 4 ID : 87827012648  
Status : **Answered**  
Chosen Option : 3

Q.12 Choose the odd figure out from the following :



- (1)
- (2)
- (3)
- (4)

- Options
- 1. 1
  - 2. 2
  - 3. 3
  - 4. 4

Question Type : MCQ  
Question ID : 8782703205  
Option 1 ID : 87827012641  
Option 2 ID : 87827012642  
Option 3 ID : 87827012643  
Option 4 ID : 87827012644  
Status : Answered  
Chosen Option : 1

Q.13 Choose the correct option from the given alternatives which is similarly related as the given pair of words :  
Steel : Utensils

- (1) Statue : Bronze
- (2) Brass : Metal
- (3) Iron : Bridge
- (4) Duralumin : Aircraft

- Options
- 1. 1
  - 2. 2
  - 3. 3
  - 4. 4

Question Type : MCQ  
Question ID : 8782703219  
Option 1 ID : 87827012697  
Option 2 ID : 87827012698  
Option 3 ID : 87827012699  
Option 4 ID : 87827012700  
Status : Answered  
Chosen Option : 3

**Q.14** There are two clocks both set to show 8 pm on Tuesday. One clock gains 3 minutes in an hour and the other clock loses 5 minutes in an hour. By how much time do the two clocks differ at 6 pm on Wednesday (next day) ?

- (1) 3 hours and 6 minutes
- (2) 1 hour and 58 minutes
- (3) 2 hours and 38 minutes
- (4) 2 hours and 56 minutes

**Options** 1. 1  
2. 2  
3. 3  
4. 4

Question Type : **MCQ**  
Question ID : **8782703196**  
Option 1 ID : **87827012605**  
Option 2 ID : **87827012606**  
Option 3 ID : **87827012607**  
Option 4 ID : **87827012608**  
Status : **Answered**  
Chosen Option : **4**

**Q.15** How many meaningful words can be made by changing only the consonants by the previous letter in English alphabet in the word NEAT and using each letter only once in each word ?

- (1) One
- (2) Two
- (3) Three
- (4) Four

**Options** 1. 1  
2. 2  
3. 3  
4. 4

Question Type : **MCQ**  
Question ID : **8782703214**  
Option 1 ID : **87827012677**  
Option 2 ID : **87827012678**  
Option 3 ID : **87827012679**  
Option 4 ID : **87827012680**  
Status : **Answered**  
Chosen Option : **1**

**Q.16** Two statements are given below. Decide whether the data provided in the statements is sufficient to answer the question.

It is 9.00 pm, when can Mukesh get the next bus for Laxmannagar from sitapur ?

Statements :

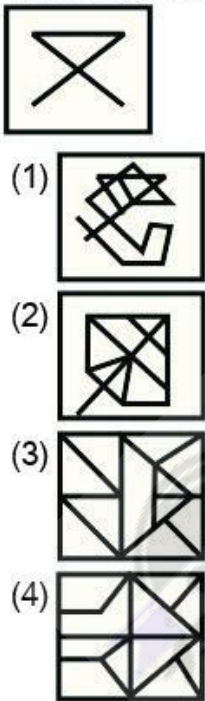
- I. Buses for Laxmannagar from sitapur leave after every 30 minutes till 11 pm.
- II. Fifteen minutes ago one bus has left for Laxmannagar.

- (1) The data in statement (II) alone is sufficient to answer the question, while the data in statement (I) alone is not sufficient to answer the question.
- (2) The data either in statement (I) alone or in (II) alone are sufficient to answer the question.
- (3) The data given in statement (I) and (II) together are not sufficient to answer the question.
- (4) The data in both statements (I) and (II) together are necessary to answer the question.

- Options
- 1. 1
  - 2. 2
  - 3. 3
  - 4. 4

Question Type : **MCQ**  
Question ID : **8782703208**  
Option 1 ID : **87827012653**  
Option 2 ID : **87827012654**  
Option 3 ID : **87827012655**  
Option 4 ID : **87827012656**  
Status : **Answered**  
Chosen Option : **4**

**Q.17** Choose the correct option in which the given figure is embedded :



- Options
- 1. 1
  - 2. 2
  - 3. 3
  - 4. 4

Question Type : **MCQ**  
Question ID : **8782703204**  
Option 1 ID : **87827012637**  
Option 2 ID : **87827012638**  
Option 3 ID : **87827012639**  
Option 4 ID : **87827012640**  
Status : **Answered**  
Chosen Option : **2**

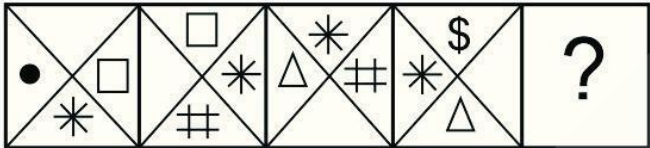
**Q.18** X is as many years younger than Y as he is older than Z. If the sum of the ages of Y and Z is 50 years, then which of the following is true based on the above information ?

- (1) The difference between Y and X's age is 10 years
- (2) The age of X is 25 years
- (3) The age of Y is 30 years
- (4) The sum of the ages of the X,Y and Z is 80 years

- Options**
- 1. 1
  - 2. 2
  - 3. 3
  - 4. 4

Question Type : **MCQ**  
Question ID : **8782703209**  
Option 1 ID : **87827012657**  
Option 2 ID : **87827012658**  
Option 3 ID : **87827012659**  
Option 4 ID : **87827012660**  
Status : **Answered**  
Chosen Option : **2**

**Q.19** Choose the correct option to replace the question mark (?) to complete the following figural series.



- (1)
- (2)
- (3)
- (4)

- Options**
- 1. 1
  - 2. 2
  - 3. 3
  - 4. 4

Question Type : **MCQ**  
Question ID : **8782703207**  
Option 1 ID : **87827012649**  
Option 2 ID : **87827012650**  
Option 3 ID : **87827012651**  
Option 4 ID : **87827012652**  
Status : **Answered**  
Chosen Option : **3**

Q.20 Choose the group of letters which is different from others.

(1) C F G E D

(2) L O P N M

(3) H J L K I

(4) R U V T S

Options

1. 1
2. 2
3. 3
4. 4

Question Type : **MCQ**

Question ID : **8782703221**

Option 1 ID : **87827012705**

Option 2 ID : **87827012706**

Option 3 ID : **87827012707**

Option 4 ID : **87827012708**

Status : **Answered**

Chosen Option : **3**

Q.21 In a queue, A is nineteenth from the front while B is fifteenth from the back. If C is twenty-eighth from the front and is exactly in the middle of A and B, then how many persons are there in the queue ?

(1) 47

(2) 48

(3) 51

(4) 49

Options

1. 1
2. 2
3. 3
4. 4

Question Type : **MCQ**

Question ID : **8782703222**

Option 1 ID : **87827012709**

Option 2 ID : **87827012710**

Option 3 ID : **87827012711**

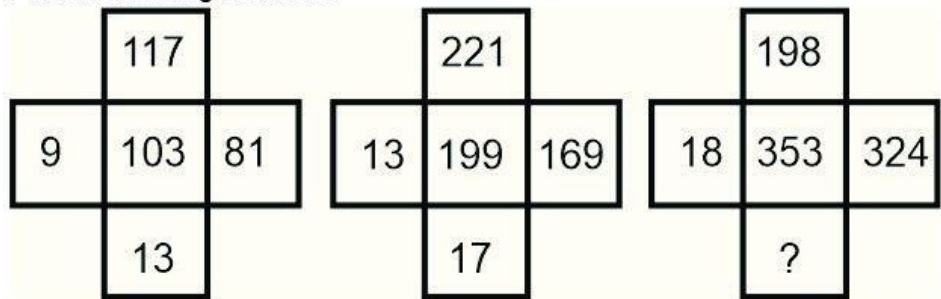
Option 4 ID : **87827012712**

Status : **Answered**

Chosen Option : **3**



Q.22 Find the missing number :



- (1) 21
- (2) 11
- (3) 13
- (4) 9

Options 1. 1  
2. 2  
3. 3  
4. 4

Question Type : MCQ  
Question ID : 8782703201  
Option 1 ID : 87827012625  
Option 2 ID : 87827012626  
Option 3 ID : 87827012627  
Option 4 ID : 87827012628  
Status : Answered  
Chosen Option : 2

Q.23 In the following question a statement is followed by two arguments.  
Decide which of the arguments is/are strong ?

Statement :  
Should schemes of voluntary retirement be introduced in all sick public sector units in India ?  
Arguments :  
(I) Yes, excess and inefficient staff is one of the reasons of sickness of public sector organizations though they are experienced.  
(II) Yes, this is what private and multinational companies do in the developed countries.

- (1) Only argument (II) is strong.
- (2) Only argument (I) is strong.
- (3) Both (I) and (II) are stron.
- (4) Neither (I) nor (II) is strong.

Options 1. 1  
2. 2  
3. 3  
4. 4

Question Type : MCQ  
Question ID : 8782703198  
Option 1 ID : 87827012613  
Option 2 ID : 87827012614  
Option 3 ID : 87827012615  
Option 4 ID : 87827012616  
Status : Answered  
Chosen Option : 1

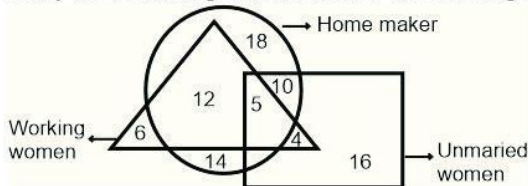
**Q.24** Ajay left home for the bus stop 15 minutes earlier than usual. It takes 10 minutes to reach the stop. He reached the stop at 9:40 am. What time does he usually leave home for the bus stop ?

- (1) 8:45 am
- (2) 9:45 am
- (3) 9:00 am
- (4) 8:30 am

**Options** 1. 1  
2. 2  
3. 3  
4. 4

Question Type : **MCQ**  
Question ID : 8782703223  
Option 1 ID : 87827012713  
Option 2 ID : 87827012714  
Option 3 ID : 87827012715  
Option 4 ID : 87827012716  
Status : **Answered**  
Chosen Option : 2

**Q.25** Study the Venn diagram and answer the following question.



In the above diagram which of the following is true ?

- (1) The number of unmarried women who are working is 5.
- (2) The number unmarried women who are homemakers is 18.
- (3) The number of unmarried women who are working as well as are home maker also is 5.
- (4) The number of women who are only homemaker is 14.

**Options** 1. 1  
2. 2  
3. 3  
4. 4

Question Type : **MCQ**  
Question ID : 8782703215  
Option 1 ID : 87827012681  
Option 2 ID : 87827012682  
Option 3 ID : 87827012683  
Option 4 ID : 87827012684  
Status : **Answered**  
Chosen Option : 3

**Q.26** Five candidates Pawan, Jimmy, Rohan, Dinesh and Anshul went for the Group Discussion (GD) and Personal Interview (PI). The panel judged these five candidates in GD and the PI and ranked them in a descending order. Anshul, who was ranked first in the GD, was last in PI, Rohan had the same ranking in both and was just above Anshul in the PI. In the GD, Pawan was just above Dinesh but in the PI he was in the middle, after Jimmy.  
To get the final selected list, the ranks of the candidates in the GD and PI are added up. Who among the following has the maximum chances of being selected ?

- (1) Pawan
- (2) Dinesh
- (3) Rohan
- (4) Jimmy

**Options** 1. 1  
2. 2  
3. 3  
4. 4

Question Type : **MCQ**  
Question ID : **8782703211**  
Option 1 ID : **87827012665**  
Option 2 ID : **87827012666**  
Option 3 ID : **87827012667**  
Option 4 ID : **87827012668**  
Status : **Answered**  
Chosen Option : **2**

**Q.27** In a row of boys, Amit is sixteenth from the left and Bob is fourth from the right. There are five boys between Amit and Bob. Chetan is just left of Amit. What is Chetan's position from the right ?

- (1) 10<sup>th</sup>
- (2) 11<sup>th</sup>
- (3) 13<sup>th</sup>
- (4) 15<sup>th</sup>

**Options** 1. 1  
2. 2  
3. 3  
4. 4

Question Type : **MCQ**  
Question ID : **8782703199**  
Option 1 ID : **87827012617**  
Option 2 ID : **87827012618**  
Option 3 ID : **87827012619**  
Option 4 ID : **87827012620**  
Status : **Answered**  
Chosen Option : **2**

**Q.28** You are standing in the middle of a square field and start walking diagonally to North-East corner. Then in midway you turn right and reach the far end of the field. Then you turn right and start walking. In the midway to other end, you again turn right and start walking straight. After walking  $\frac{1}{3}$  distance of diagonal length, you turn to your left and reach a new corner. In what direction are you now with respect to the middle point ?

- (1) South
- (2) South-west
- (3) North
- (4) North-west

**Options** 1. 1  
2. 2  
3. 3  
4. 4

Question Type : **MCQ**  
Question ID : **8782703203**  
Option 1 ID : **87827012633**  
Option 2 ID : **87827012634**  
Option 3 ID : **87827012635**  
Option 4 ID : **87827012636**  
Status : **Answered**  
Chosen Option : **2**

**Q.29** If in the English Alphabet every fourth letter is replaced by the symbol ☉ and every seventh letter is replaced by ▲, then which of the following would be fifth to the left of the nineteenth element from the left ?

- (1) G
- (2) ▲
- (3) ☉
- (4) F

**Options** 1. 1  
2. 2  
3. 3  
4. 4

Question Type : **MCQ**  
Question ID : **8782703210**  
Option 1 ID : **87827012661**  
Option 2 ID : **87827012662**  
Option 3 ID : **87827012663**  
Option 4 ID : **87827012664**  
Status : **Answered**  
Chosen Option : **2**

**Q.30** Jyoti and Mukesh are in control of the following number-letter-symbol series respectively.

Jyoti : 3 \* P T 7 \$ M 2 A @ 9 F R # 5

Mukesh : A 1 K # 6 C G © F 3 7 ☒ 4

Which of the following is true ?

- (1) The number of letters of Joyti's series is less than that of Mukesh's series
- (2) The number of symbols of both the series are equal
- (3) The number of letters of Jyoti's series is more than the Mukesh's series
- (4) The sum of the numbers followed by letter in Mukesh's series is 5

- Options**
- 1. 1
  - 2. 2
  - 3. 3
  - 4. 4

Question Type : **MCQ**  
Question ID : **8782703202**  
Option 1 ID : **87827012629**  
Option 2 ID : **87827012630**  
Option 3 ID : **87827012631**  
Option 4 ID : **87827012632**  
Status : **Answered**  
Chosen Option : **3**

Section : **General Knowledge/ General Awareness**

**Q.1** Who among the following provided evidence in the year 1920 that the Universe is expanding ?

- (1) Otto Schmidt
- (2) Edwin Hubble
- (3) Carl Weizascar
- (4) Sir Harold Jeffrey

- Options**
- 1. 1
  - 2. 2
  - 3. 3
  - 4. 4

Question Type : **MCQ**  
Question ID : **8782703236**  
Option 1 ID : **87827012765**  
Option 2 ID : **87827012766**  
Option 3 ID : **87827012767**  
Option 4 ID : **87827012768**  
Status : **Answered**  
Chosen Option : **1**

**Q.2** Which of the statements from the following are **incorrect** ?

- A. Michelangelo painted the Last Supper in the year 1495.
- B. Geoffrey Chaucer's Canterbury Tales was published in the year 1390.
- C. Leonardo da Vinci painted the Sistine Chapel Ceiling in the year 1512.
- D. The novel, Don Quixote, was written in Spanish in the year 1605.

Select the answer from the codes given below :

- (1) A and C only
- (2) A, B and C only
- (3) C and D only
- (4) B, C and D only

**Options** 1. 1

2. 2

3. 3

4. 4

Question Type : **MCQ**

Question ID : **8782703234**

Option 1 ID : **87827012757**

Option 2 ID : **87827012758**

Option 3 ID : **87827012759**

Option 4 ID : **87827012760**

Status : **Not Answered**

Chosen Option : --

**Q.3** Graphite, which is also known as black lead is another crystalline form of :

- (1) Lead
- (2) Carbon
- (3) Lead acetate
- (4) Carbon tetrachloride

**Options** 1. 1

2. 2

3. 3

4. 4

Question Type : **MCQ**

Question ID : **8782703246**

Option 1 ID : **87827012805**

Option 2 ID : **87827012806**

Option 3 ID : **87827012807**

Option 4 ID : **87827012808**

Status : **Answered**

Chosen Option : **2**

**Q.4** Who among the following suggested that the Earth and the Moon formed a single rapidly rotating body, which became a dumb-bell-shaped body and eventually it broke ?

- (1) Immanuel Kant
- (2) Sir James Jeans
- (3) Carl Weizascar
- (4) Sir George Darwin

**Options** 1. 1  
2. 2  
3. 3  
4. 4

Question Type : **MCQ**  
Question ID : **8782703237**  
Option 1 ID : **87827012769**  
Option 2 ID : **87827012770**  
Option 3 ID : **87827012771**  
Option 4 ID : **87827012772**  
Status : **Answered**  
Chosen Option : **2**

**Q.5** Which of the following is **not** a characteristic property of metal ?

- (1) Metals are malleable
- (2) Metals are insulators
- (3) Metals are lustrous
- (4) Metals are sonorous

**Options** 1. 1  
2. 2  
3. 3  
4. 4

Question Type : **MCQ**  
Question ID : **8782703249**  
Option 1 ID : **87827012817**  
Option 2 ID : **87827012818**  
Option 3 ID : **87827012819**  
Option 4 ID : **87827012820**  
Status : **Answered**  
Chosen Option : **2**



**Q.6** Where are the Headquarters of the Central Institute for Cotton Research located ?

- (1) Nagpur
- (2) Pune
- (3) Lucknow
- (4) Rohtak

**Options** 1. 1  
2. 2  
3. 3  
4. 4

Question Type : **MCQ**  
Question ID : **8782703240**  
Option 1 ID : **87827012781**  
Option 2 ID : **87827012782**  
Option 3 ID : **87827012783**  
Option 4 ID : **87827012784**  
Status : **Answered**  
Chosen Option : **2**

**Q.7** Who among the following led the Peasant Movement in Bardoli (Bardoli Satyagraha) against enhancement of land revenue in the year 1928 ?

- (1) Rajendra Prasad
- (2) Motilal Nehru
- (3) Vallabhbhai Patel
- (4) Mahatma Gandhi

**Options** 1. 1  
2. 2  
3. 3  
4. 4

Question Type : **MCQ**  
Question ID : **8782703233**  
Option 1 ID : **87827012753**  
Option 2 ID : **87827012754**  
Option 3 ID : **87827012755**  
Option 4 ID : **87827012756**  
Status : **Answered**  
Chosen Option : **4**



**Q.8** Who among the following acted as the President of India on the death of Fakhruddin Ali Ahmed until a new President was elected ?

- (1) V.V.Giri
- (2) B.D. Jatti
- (3) N.Sanjiva Reddy
- (4) Zakir Husain

**Options** 1. 1  
2. 2  
3. 3  
4. 4

Question Type : **MCQ**

Question ID : **8782703242**

Option 1 ID : **87827012789**

Option 2 ID : **87827012790**

Option 3 ID : **87827012791**

Option 4 ID : **87827012792**

Status : **Answered**

Chosen Option : **4**

<https://t.me/UPDATXAMS>

**Q.9** Birju Maharaj belongs to which form of classical dance ?

- (1) Kathakali
- (2) Bharatanatyam
- (3) Kathak
- (4) Odissi

**Options** 1. 1  
2. 2  
3. 3  
4. 4

Question Type : **MCQ**

Question ID : **8782703228**

Option 1 ID : **87827012733**

Option 2 ID : **87827012734**

Option 3 ID : **87827012735**

Option 4 ID : **87827012736**

Status : **Answered**

Chosen Option : **3**



Q.10 Who was the founder of Shunga Dynasty ?

- (1) AjataShatru
- (2) Bimbisara
- (3) Agnimitra
- (4) Pushyamitra

Options 1. 1  
2. 2  
3. 3  
4. 4

Question Type : **MCQ**  
Question ID : **8782703254**  
Option 1 ID : **87827012837**  
Option 2 ID : **87827012838**  
Option 3 ID : **87827012839**  
Option 4 ID : **87827012840**  
Status : **Answered**  
Chosen Option : 1

Q.11 World Trade Organization was established in which year ?

- (1) 1993
- (2) 1994
- (3) 1995
- (4) 1996

Options 1. 1  
2. 2  
3. 3  
4. 4

Question Type : **MCQ**  
Question ID : **8782703230**  
Option 1 ID : **87827012741**  
Option 2 ID : **87827012742**  
Option 3 ID : **87827012743**  
Option 4 ID : **87827012744**  
Status : **Not Answered**  
Chosen Option : --

Q.12 Which of the following is the State animal of Uttarakhand ?

- (1) Ox
- (2) Alpine Musk Deer
- (3) Hoolock Gibbon
- (4) Blackbuck

Options 1. 1  
2. 2  
3. 3  
4. 4

Question Type : MCQ  
Question ID : 8782703232  
Option 1 ID : 87827012749  
Option 2 ID : 87827012750  
Option 3 ID : 87827012751  
Option 4 ID : 87827012752  
Status : Answered  
Chosen Option : 2

Q.13 The Headquarters of the International Criminal Police Organization (INTERPOL) are located in which of the following places?

- (1) Krakow, Poland
- (2) Madrid, Spain
- (3) Copenhagen, Denmark
- (4) Lyon, France

Options 1. 1  
2. 2  
3. 3  
4. 4

Question Type : MCQ  
Question ID : 8782703244  
Option 1 ID : 87827012797  
Option 2 ID : 87827012798  
Option 3 ID : 87827012799  
Option 4 ID : 87827012800  
Status : Not Answered  
Chosen Option : --

**Q.14** The present Lok Sabha is :

(1) 15<sup>th</sup>

(2) 16<sup>th</sup>

(3) 17<sup>th</sup>

(4) 18<sup>th</sup>

**Options** 1. 1

2. 2

3. 3

4. 4

Question Type : **MCQ**

Question ID : **8782703226**

Option 1 ID : **87827012725**

Option 2 ID : **87827012726**

Option 3 ID : **87827012727**

Option 4 ID : **87827012728**

Status : **Not Answered**

Chosen Option : --

**Q.15** Where are the Headquarters of ASEAN (Association of South East Asian Nations) situated ?

(1) Laos

(2) Vietnam

(3) Indonesia

(4) Malaysia

**Options** 1. 1

2. 2

3. 3

4. 4

Question Type : **MCQ**

Question ID : **8782703238**

Option 1 ID : **87827012773**

Option 2 ID : **87827012774**

Option 3 ID : **87827012775**

Option 4 ID : **87827012776**

Status : **Answered**

Chosen Option : **3**



**Q.16** Which among the following provisions was inserted in the Constitution of India by the Forty-Second Amendment Act, 1976 ?

- (1) Article 21A, Right to Education
- (2) Article 51A, Fundamental Duties
- (3) Article 134A, Certificate for appeal to the Supreme Court
- (4) Article 224A, Appointment of retired Judges at sittings of High Court

**Options** 1. 1

- 2. 2
- 3. 3
- 4. 4

Question Type : **MCQ**

Question ID : **8782703243**

Option 1 ID : **87827012793**

Option 2 ID : **87827012794**

Option 3 ID : **87827012795**

Option 4 ID : **87827012796**

Status : **Answered**

Chosen Option : **2**

**Q.17** Consider the following statements :

- A. There are 26 High Courts in India.
- B. Six High Courts have control over more than one State/Union Territory.

Select the correct answer using the code given below :

- (1) Only A is correct
- (2) Only B is correct
- (3) Both A and B are correct
- (4) Neither A nor B is correct

**Options** 1. 1

- 2. 2
- 3. 3
- 4. 4

Question Type : **MCQ**

Question ID : **8782703225**

Option 1 ID : **87827012721**

Option 2 ID : **87827012722**

Option 3 ID : **87827012723**

Option 4 ID : **87827012724**

Status : **Answered**

Chosen Option : **1**



**Q.18** Coal India Limited (CIL), a Maharatna company under the Ministry of Coal has its headquarters in which of the following places ?

- (1) Kothagudem, Telangana
- (2) Chennai, Tamil Nadu
- (3) Bhubaneswar, Odisha
- (4) Kolkata, West Bengal

**Options**

- 1. 1
- 2. 2
- 3. 3
- 4. 4

Question Type : **MCQ**

Question ID : **8782703231**

Option 1 ID : **87827012745**

Option 2 ID : **87827012746**

Option 3 ID : **87827012747**

Option 4 ID : **87827012748**

Status : **Answered**

Chosen Option : **2**

**Q.19** Which of the following gases can be used for storage of fresh sample of an oil for longer duration ?

- (1) Nitrogen
- (2) Oxygen
- (3) Carbon dioxide
- (4) Nitrogen oxide

**Options**

- 1. 1
- 2. 2
- 3. 3
- 4. 4

Question Type : **MCQ**

Question ID : **8782703247**

Option 1 ID : **87827012809**

Option 2 ID : **87827012810**

Option 3 ID : **87827012811**

Option 4 ID : **87827012812**

Status : **Answered**

Chosen Option : **1**



**Q.20** Central Water and Power Research Station (CWPRS), an apex research and development institution in the field of hydraulics and allied research in the water and power sector, is located in which of the following places?

- (1) Dehradun
- (2) Pune
- (3) Coimbatore
- (4) Hyderabad

**Options** 1. 1  
2. 2  
3. 3  
4. 4

Question Type : **MCQ**  
Question ID : **8782703245**  
Option 1 ID : **87827012801**  
Option 2 ID : **87827012802**  
Option 3 ID : **87827012803**  
Option 4 ID : **87827012804**  
Status : **Not Answered**  
Chosen Option : --

**Q.21** The State of Uttar Pradesh shares border with which of the following States ?

- A. Jharkhand
- B. Chhattisgarh
- C. Rajasthan
- D. Bihar

Select the correct answer using the code given below :

- (1) C and D only
- (2) B and C only
- (3) A and B only
- (4) A, B, C and D

**Options** 1. 1  
2. 2  
3. 3  
4. 4

Question Type : **MCQ**  
Question ID : **8782703252**  
Option 1 ID : **87827012829**  
Option 2 ID : **87827012830**  
Option 3 ID : **87827012831**  
Option 4 ID : **87827012832**  
Status : **Answered**  
Chosen Option : **4**

**Q.22** सागर माला योजना के बारे में निम्नलिखित कौन-सा एक कथन सही नहीं है ?

- (1) यह देश में पत्तन-प्रधान विकास को प्रोत्साहित करने हेतु केन्द्रीय क्षेत्र की प्रमुख योजना है।
- (2) यह तटरेखा जो कि 7,500 किमी तक फैली हुई है, उससे लाभ उठाने हेतु शुरू की गयी थी।
- (3) इस योजना के अन्तर्गत मंत्रालय विभिन्न जल परियोजनाओं में कार्य करने हेतु पत्तन कर्मचारियों के लिए वित्तीय सहायता प्रदान करता है।
- (4) इस योजना का एक मुख्य उद्देश्य पत्तनों का आधुनिकीकरण करना है।

- Options**
- 1. 1
  - 2. 2
  - 3. 3
  - 4. 4

Question Type : **MCQ**  
Question ID : **8782703248**  
Option 1 ID : **87827012813**  
Option 2 ID : **87827012814**  
Option 3 ID : **87827012815**  
Option 4 ID : **87827012816**  
Status : **Answered**  
Chosen Option : **4**

**Q.23** In which year, was the Sangeet Natak Akademi reconstituted by the Government as a society and registered under the Societies Registration Act, 1860?

- (1) 1965
- (2) 1971
- (3) 1961
- (4) 1964

- Options**
- 1. 1
  - 2. 2
  - 3. 3
  - 4. 4

Question Type : **MCQ**  
Question ID : **8782703251**  
Option 1 ID : **87827012825**  
Option 2 ID : **87827012826**  
Option 3 ID : **87827012827**  
Option 4 ID : **87827012828**  
Status : **Not Answered**  
Chosen Option : **--**

Q.24 Match List I with List II correctly :

List I	List II
A. Tyagraja	I. 1498-1546
B. Mirabai	II. 1767-1843
C. Surdas	III. 1532-1623
D. Tulsidas	IV. 1483-1563

Select the correct answer using the code given below :

- (1) A-III, B-II, C-I, D-IV
- (2) A-II, B-I, C-IV, D-III
- (3) A-III, B-I, C-II, D-IV
- (4) A-IV, B-II, C-III, D-I

Options 1. 1  
2. 2  
3. 3  
4. 4

Question Type : MCQ

Question ID : 8782703250

Option 1 ID : 87827012821

Option 2 ID : 87827012822

Option 3 ID : 87827012823

Option 4 ID : 87827012824

Status : Answered

Chosen Option : 3

Q.25 Which of the following countries have never won ICC Women's Cricket World Cup (One-day International) ?

- (1) India
- (2) New Zealand
- (3) Australia
- (4) England

Options 1. 1  
2. 2  
3. 3  
4. 4

Question Type : MCQ

Question ID : 8782703253

Option 1 ID : 87827012833

Option 2 ID : 87827012834

Option 3 ID : 87827012835

Option 4 ID : 87827012836

Status : Answered

Chosen Option : 1

**Q.26** Who, among the following is the recipient of Sahitya Akademi Award 2022 for English ?

- (1) Amitav Ghosh
- (2) Aarvind Adiga
- (3) Anuradha Roy
- (4) M.Rajendran

**Options** 1. 1  
2. 2  
3. 3  
4. 4

Question Type : **MCQ**  
Question ID : **8782703241**  
Option 1 ID : **87827012785**  
Option 2 ID : **87827012786**  
Option 3 ID : **87827012787**  
Option 4 ID : **87827012788**  
Status : **Answered**  
Chosen Option : **3**

**Q.27** Which one among the following is a key initiative under the Digital India Programme to develop a common, united platform and mobile app to facilitate a single point access to all government services ?

- (1) UNNATI
- (2) UMANG
- (3) SAKSHAM
- (4) PRAGATI

**Options** 1. 1  
2. 2  
3. 3  
4. 4

Question Type : **MCQ**  
Question ID : **8782703239**  
Option 1 ID : **87827012777**  
Option 2 ID : **87827012778**  
Option 3 ID : **87827012779**  
Option 4 ID : **87827012780**  
Status : **Answered**  
Chosen Option : **4**



**Q.28** Which one of the following is the 11<sup>th</sup> Biosphere Reserves from India, included in the UNESCO's World Network of Biosphere Reserves ?

- (1) Nanda Devi
- (2) Dehang-Debang
- (3) Manas
- (4) Khangchendzonga

**Options** 1. 1  
2. 2  
3. 3  
4. 4

Question Type : **MCQ**  
Question ID : **8782703229**  
Option 1 ID : **87827012737**  
Option 2 ID : **87827012738**  
Option 3 ID : **87827012739**  
Option 4 ID : **87827012740**  
Status : **Answered**  
Chosen Option : **1**

**Q.29** The Regional Geography Approach was developed by which one of the following geographers ?

- (1) Alexander von humboldt
- (2) Richard Hartshorne
- (3) Arnaldo Faustini
- (4) Carl Ritter

**Options** 1. 1  
2. 2  
3. 3  
4. 4

Question Type : **MCQ**  
Question ID : **8782703235**  
Option 1 ID : **87827012761**  
Option 2 ID : **87827012762**  
Option 3 ID : **87827012763**  
Option 4 ID : **87827012764**  
Status : **Not Answered**  
Chosen Option : **--**



**Q.30** Which of the following operations can be attributed for the increased milk production in India by more than eight times between 1951-2014 ?

- (1) Operation Amrit
- (2) Operation Sudha
- (3) Operation Flood
- (4) Operation Ganga

**Options** 1. 1

- 2. 2
- 3. 3
- 4. 4

Question Type : **MCQ**

Question ID : **8782703227**

Option 1 ID : **87827012729**

Option 2 ID : **87827012730**

Option 3 ID : **87827012731**

Option 4 ID : **87827012732**

Status : **Answered**

Chosen Option : **1**

Section : **Quantitative Ability**

**Q.1** The length and breadth of a rectangle are increased by 15% and 8% respectively. By what percentage will the area of the rectangle increase ?

- (1) 13.4
- (2) 24.2
- (3) 15.2
- (4) 22.4

**Options** 1. 1

- 2. 2
- 3. 3
- 4. 4

Question Type : **MCQ**

Question ID : **8782703267**

Option 1 ID : **87827012889**

Option 2 ID : **87827012890**

Option 3 ID : **87827012891**

Option 4 ID : **87827012892**

Status : **Answered**

Chosen Option : **2**

**Q.2** The marked price of an item was ₹ 3600. A man bought the item for ₹ 2754 after getting successive discounts of 10% and X% . What is the value of X ?

- (1) 12
- (2) 12.5
- (3) 15
- (4) 16

**Options** 1. 1

- 2. 2
- 3. 3
- 4. 4

Question Type : **MCQ**

Question ID : **8782703261**

Option 1 ID : **87827012865**

Option 2 ID : **87827012866**

Option 3 ID : **87827012867**

Option 4 ID : **87827012868**

Status : **Answered**

Chosen Option : **3**

**Q.3** The simple interest on a sum of money for 3 years at rate of 3% per annum is ₹ 18 less than simple interest on same amount for 6 years at the rate of  $2\frac{1}{2}$ % per annum. Then simple interest on the same amount for 5 years at 4% per annum will be :

- (1) ₹ 60
- (2) ₹ 90
- (3) ₹ 81
- (4) ₹ 75

**Options** 1. 1

- 2. 2
- 3. 3
- 4. 4

Question Type : **MCQ**

Question ID : **8782703284**

Option 1 ID : **87827012957**

Option 2 ID : **87827012958**

Option 3 ID : **87827012959**

Option 4 ID : **87827012960**

Status : **Answered**

Chosen Option : **1**

**Q.4** A retailer buys 80 ballpens at the marked price of 72 pens from the wholesaler. If he sells these pens after giving 4% discount, then what will be his profit percentage ?

- (1) 8
- (2)  $6\frac{2}{3}$
- (3)  $5\frac{2}{3}$
- (4) 5

**Options** 1. 1  
2. 2  
3. 3  
4. 4

Question Type : **MCQ**  
Question ID : **8782703260**  
Option 1 ID : **87827012861**  
Option 2 ID : **87827012862**  
Option 3 ID : **87827012863**  
Option 4 ID : **87827012864**  
Status : **Answered**  
Chosen Option : **2**

**Q.5** The following table shows the sales of books (in thousands) from five branches of a publishing company during three years.

Year\Branch	A	B	C	D	E
2018	80	75	95	85	70
2019	105	65	110	95	95
2020	85	95	105	60	80

What is the ratio of the total sale of branch A during the three years to the total sale in 2018 in all branches ?

- (1) 2:3
- (2) 3:4
- (3) 4:5
- (4) 5:7

**Options** 1. 1  
2. 2  
3. 3  
4. 4

Question Type : **MCQ**  
Question ID : **8782703270**  
Option 1 ID : **87827012901**  
Option 2 ID : **87827012902**  
Option 3 ID : **87827012903**  
Option 4 ID : **87827012904**  
Status : **Answered**  
Chosen Option : **1**

**Q.6**

Four children A,B,C and D divide a bag of sweets. A takes  $\left(\frac{2}{3}\right)^{\text{rd}}$  of them, B takes  $\left(\frac{3}{5}\right)^{\text{th}}$  of the remaining and the rest are equally shared between C and D. What fraction of the total sweets did D get ?

- (1)  $\frac{1}{15}$
- (2)  $\frac{2}{5}$
- (3)  $\frac{2}{15}$
- (4)  $\frac{1}{10}$

**Options** 1. 1  
2. 2  
3. 3  
4. 4

Question Type : **MCQ**

Question ID : **8782703256**

Option 1 ID : **87827012845**

Option 2 ID : **87827012846**

Option 3 ID : **87827012847**

Option 4 ID : **87827012848**

Status : **Answered**

Chosen Option : 1

**Q.7**

The total population of a town is 28000. There are 60% females and 30% of them are literate. If 35% males are illiterate, then the percentage of illiterate population, is :

- (1) 45
- (2) 50
- (3) 54
- (4) 56

**Options** 1. 1  
2. 2  
3. 3  
4. 4

Question Type : **MCQ**

Question ID : **8782703271**

Option 1 ID : **87827012905**

Option 2 ID : **87827012906**

Option 3 ID : **87827012907**

Option 4 ID : **87827012908**

Status : **Answered**

Chosen Option : 4

Q.8  $6 \div 6 \text{ of } 6 \times 2 + 2 \div 2 \times 2 \text{ of } 6 - (6 - 2) \div 4 \times 2 =$

(1)  $\frac{29}{2}$

(2)  $\frac{31}{3}$

(3)  $\frac{11}{2}$

(4)  $\frac{4}{3}$

Options

1. 1
2. 2
3. 3
4. 4

Question Type : MCQ

Question ID : 8782703281

Option 1 ID : 87827012945

Option 2 ID : 87827012946

Option 3 ID : 87827012947

Option 4 ID : 87827012948

Status : Answered

Chosen Option : 2

Q.9 The circumference of two circles are 242 cm and 352 cm respectively. What is the difference between their radii ?

$(\pi = \frac{22}{7})$

(1) 5 cm

(2) 10 cm

(3) 8.75 cm

(4) 17.5 cm

Options

1. 1
2. 2
3. 3
4. 4

Question Type : MCQ

Question ID : 8782703269

Option 1 ID : 87827012897

Option 2 ID : 87827012898

Option 3 ID : 87827012899

Option 4 ID : 87827012900

Status : Answered

Chosen Option : 4



Q.10 Arrange the numbers A, B and C in ascending order where :

$$A = \frac{(0.11)^2}{(1.1)^2 \times 0.1}$$

$$B = \frac{(1.1)^2}{11^2 \times (0.01)^2}$$

$$C = \frac{(0.011)^2}{(1.1)^2 \times (0.01)^2}$$

(1) B, A, C

(2) C, B, A

(3) C, A, B

(4) A, C, B

Options 1. 1

2. 2

3. 3

4. 4

Question Type : MCQ

Question ID : 8782703280

Option 1 ID : 87827012941

Option 2 ID : 87827012942

Option 3 ID : 87827012943

Option 4 ID : 87827012944

Status : Answered

Chosen Option : 4

Q.11 By selling two pieces of an item for ₹ 2400, a person gains the cost price of three pieces of the item. The profit percentage is :

(1) 150

(2) 200

(3) 250

(4) 300

Options 1. 1

2. 2

3. 3

4. 4

Question Type : MCQ

Question ID : 8782703278

Option 1 ID : 87827012933

Option 2 ID : 87827012934

Option 3 ID : 87827012935

Option 4 ID : 87827012936

Status : Answered

Chosen Option : 1



**Q.12** A man walking at a speed of 3 km/hr crosses a square field diagonally in 5 minutes. The area of the field (in  $m^2$ ) is :

- (1) 15625
- (2) 12500
- (3) 25000
- (4) 31250

**Options** 1. 1  
2. 2  
3. 3  
4. 4

Question Type : **MCQ**  
Question ID : **8782703272**  
Option 1 ID : **87827012909**  
Option 2 ID : **87827012910**  
Option 3 ID : **87827012911**  
Option 4 ID : **87827012912**  
Status : **Answered**  
Chosen Option : **4**

**Q.13** A is twice as good a workman as B and together they finish a piece of work in 24 days. In how many days will B alone finish the work ?

- (1) 36
- (2) 54
- (3) 64
- (4) 72

**Options** 1. 1  
2. 2  
3. 3  
4. 4

Question Type : **MCQ**  
Question ID : **8782703276**  
Option 1 ID : **87827012925**  
Option 2 ID : **87827012926**  
Option 3 ID : **87827012927**  
Option 4 ID : **87827012928**  
Status : **Answered**  
Chosen Option : **4**

Q.14  $2^9 : 4^{3.5} =$

- (1) 1:4
- (2) 1:1
- (3) 1:2
- (4) 4:1

Options 1. 1  
2. 2  
3. 3  
4. 4

Question Type : **MCQ**  
Question ID : **8782703273**  
Option 1 ID : **87827012913**  
Option 2 ID : **87827012914**  
Option 3 ID : **87827012915**  
Option 4 ID : **87827012916**  
Status : **Answered**  
Chosen Option : 4

Q.15 Four different electronic devices make a beep after every 30 minutes, 45 minutes,  $1\frac{1}{2}$  hours and 1 hour 45 minutes respectively. All the devices beeped together at 12 noon. They will again beep together at :

- (1) 12 midnight
- (2) 1:30 pm
- (3) 10:30 pm
- (4) 9 am

Options 1. 1  
2. 2  
3. 3  
4. 4

Question Type : **MCQ**  
Question ID : **8782703277**  
Option 1 ID : **87827012929**  
Option 2 ID : **87827012930**  
Option 3 ID : **87827012931**  
Option 4 ID : **87827012932**  
Status : **Answered**  
Chosen Option : 3



**Q.16** A person sold  $\frac{2}{3}$  of his land at a gain of 20% and the remaining at a gain of 35%. What is his overall percentage of gain ?

- (1) 27.5
- (2) 25
- (3) 28
- (4) 23.5

**Options** 1. 1

- 2. 2
- 3. 3
- 4. 4

Question Type : **MCQ**

Question ID : **8782703264**

Option 1 ID : **87827012877**

Option 2 ID : **87827012878**

Option 3 ID : **87827012879**

Option 4 ID : **87827012880**

Status : **Answered**

Chosen Option : **2**

**Q.17** A, B and C can complete a work in 10 days, 12 days and 15 days respectively. They began the work together but A left the work after 2 days of the start and C, 3 days before the completion of the work. In how many days was the work completed ?

- (1)  $6\frac{2}{3}$
- (2) 7
- (3)  $7\frac{1}{3}$
- (4)  $7\frac{1}{2}$

**Options** 1. 1

- 2. 2
- 3. 3
- 4. 4

Question Type : **MCQ**

Question ID : **8782703274**

Option 1 ID : **87827012917**

Option 2 ID : **87827012918**

Option 3 ID : **87827012919**

Option 4 ID : **87827012920**

Status : **Answered**

Chosen Option : **1**



**Q.18** By selling an article for ₹ 2700, Hari gains 20%. If he sells it for ₹ 2295, then his gain/loss percentage is :

- (1) Loss 1.96%
- (2) Gain 2%
- (3) Gain 1.96%
- (4) Loss 2%

**Options** 1. 1

- 2. 2
- 3. 3
- 4. 4

Question Type : **MCQ**

Question ID : **8782703279**

Option 1 ID : **87827012937**

Option 2 ID : **87827012938**

Option 3 ID : **87827012939**

Option 4 ID : **87827012940**

Status : **Answered**

Chosen Option : **2**

**Q.19** The circumference of two circles are 88 cm and 132 cm respectively.  
The ratio of their areas is :

- (1) 1:2
- (2) 2:3
- (3) 3:7
- (4) 4:9

**Options** 1. 1

- 2. 2
- 3. 3
- 4. 4

Question Type : **MCQ**

Question ID : **8782703265**

Option 1 ID : **87827012881**

Option 2 ID : **87827012882**

Option 3 ID : **87827012883**

Option 4 ID : **87827012884**

Status : **Answered**

Chosen Option : **4**



**Q.20** At what percent above the cost price must a shopkeeper mark his goods so that he gains 20% after giving a discount of 10% ?

- (1) 30
- (2)  $37\frac{1}{2}$
- (3) 25
- (4)  $33\frac{1}{3}$

**Options** 1. 1  
2. 2  
3. 3  
4. 4

Question Type : **MCQ**

Question ID : **8782703263**

Option 1 ID : **87827012873**

Option 2 ID : **87827012874**

Option 3 ID : **87827012875**

Option 4 ID : **87827012876**

Status : **Answered**

Chosen Option : 4

**Q.21** How many spherical lead shots each of diameter 4.2 cm can be obtained from a rectangular solid of lead with dimension 63 cm, 42 cm, 88 cm ? ( $\pi = \frac{22}{7}$ )

- (1) 750
- (2) 2250
- (3) 4200
- (4) 6000

**Options** 1. 1  
2. 2  
3. 3  
4. 4

Question Type : **MCQ**

Question ID : **8782703282**

Option 1 ID : **87827012949**

Option 2 ID : **87827012950**

Option 3 ID : **87827012951**

Option 4 ID : **87827012952**

Status : **Answered**

Chosen Option : 1



**Q.22** A car takes 3 hours to reach a destination by traveling at the speed of 60 km/hr. How long will it take to cover the same distance if it travels at the speed of 90 km/hr ?

- (1) 1 hr
- (2) 2 hrs
- (3)  $2\frac{1}{2}$  hrs
- (4)  $1\frac{1}{2}$  hrs

**Options** 1. 1  
2. 2  
3. 3  
4. 4

Question Type : **MCQ**

Question ID : **8782703268**

Option 1 ID : **87827012893**

Option 2 ID : **87827012894**

Option 3 ID : **87827012895**

Option 4 ID : **87827012896**

Status : **Answered**

Chosen Option : **2**

**Q.23** How many solid spherical balls of radius 3 mm can be made by melting a solid metallic cylinder of base radius 12 cm and height 15 cm ?

- (1) 90000
- (2) 52000
- (3) 60000
- (4) 64000

**Options** 1. 1  
2. 2  
3. 3  
4. 4

Question Type : **MCQ**

Question ID : **8782703266**

Option 1 ID : **87827012885**

Option 2 ID : **87827012886**

Option 3 ID : **87827012887**

Option 4 ID : **87827012888**

Status : **Answered**

Chosen Option : **3**



Q.24 If  $6\frac{3}{4} \times 5\frac{1}{3} + k \times 4\frac{1}{2} = 114$ , then value of k, is :

(1)  $17\frac{1}{3}$

(2)  $16\frac{3}{4}$

(3)  $13\frac{4}{5}$

(4)  $12\frac{2}{5}$

Options

1. 1
2. 2
3. 3
4. 4

Question Type : MCQ

Question ID : 8782703259

Option 1 ID : 87827012857

Option 2 ID : 87827012858

Option 3 ID : 87827012859

Option 4 ID : 87827012860

Status : Answered

Chosen Option : 1

Q.25 The HCF of two numbers is 16. Which of the following can never be their LCM ?

(1) 80

(2) 112

(3) 132

(4) 336

Options

1. 1
2. 2
3. 3
4. 4

Question Type : MCQ

Question ID : 8782703257

Option 1 ID : 87827012849

Option 2 ID : 87827012850

Option 3 ID : 87827012851

Option 4 ID : 87827012852

Status : Answered

Chosen Option : 3



**Q.26** A can complete a work in 40 days. He worked at it for 5 days and left the work. Then B took up the work and completed the remaining work in 21 days. In how many days will A and B working together complete the work ?

- (1) 12
- (2) 15
- (3) 16
- (4) 18

**Options** 1. 1  
2. 2  
3. 3  
4. 4

Question Type : **MCQ**  
Question ID : 8782703275  
Option 1 ID : 87827012921  
Option 2 ID : 87827012922  
Option 3 ID : 87827012923  
Option 4 ID : 87827012924  
Status : **Answered**  
Chosen Option : 2

**Q.27** A thief is spotted by a policeman from a distance of 150 m. When the policeman starts the chase, the thief also starts running. If the speed of the thief be 8 km/hr and of the policeman be 10 km/hr, then how far would the thief have run before he is overtaken ?

- (1) 400 m
- (2) 500 m
- (3) 600 m
- (4) 800 m

**Options** 1. 1  
2. 2  
3. 3  
4. 4

Question Type : **MCQ**  
Question ID : 8782703283  
Option 1 ID : 87827012953  
Option 2 ID : 87827012954  
Option 3 ID : 87827012955  
Option 4 ID : 87827012956  
Status : **Answered**  
Chosen Option : 3

**Q.28** Anil deposited a total of ₹1,76,800 in banks A and B at 10% p.a. compound interest. The amount received from bank A at the end of 8 years is equal to the amount received from bank B at the end of 10 years. The sum deposited by him in bank A is :

- (1) ₹ 88,400
- (2) ₹ 92,500
- (3) ₹ 96,800
- (4) ₹ 96,000

**Options** 1. 1  
2. 2  
3. 3  
4. 4

Question Type : **MCQ**

Question ID : **8782703255**

Option 1 ID : **87827012841**

Option 2 ID : **87827012842**

Option 3 ID : **87827012843**

Option 4 ID : **87827012844**

Status : **Answered**

Chosen Option : **3**

<https://t.me/UPDATXAMS>

**Q.29** Price of cooking oil is reduced by 20% which enables a shopkeeper to buy 10 litre cooking oil more for ₹ 7200. The price per litre of cooking oil before reduction was :

- (1) ₹ 150
- (2) ₹ 160
- (3) ₹ 172
- (4) ₹ 180

**Options** 1. 1  
2. 2  
3. 3  
4. 4

Question Type : **MCQ**

Question ID : **8782703262**

Option 1 ID : **87827012869**

Option 2 ID : **87827012870**

Option 3 ID : **87827012871**

Option 4 ID : **87827012872**

Status : **Answered**

Chosen Option : **4**



**Q.30** Two numbers A and B are respectively 20% and 28% less than a third number C. By what percentage is number B less than the number A?

- (1) 8
- (2) 9
- (3) 10
- (4) 12

**Options** 1. 1  
2. 2  
3. 3  
4. 4

Question Type : **MCQ**

Question ID : **8782703258**

Option 1 ID : **87827012853**

Option 2 ID : **87827012854**

Option 3 ID : **87827012855**

Option 4 ID : **87827012856**

Status : **Answered**

Chosen Option : **3**

Section : **General English with Comprehension**



### Comprehension:

Read the passage carefully and answer the question that follow :

Post-industrial society has as its defining logic the idea of work. Progress is determined in terms of GDP and GNP and the primary determinant for gauging the contribution of individuals, institutions and organisations towards society is the output obtaining of the work they do within it. If we accept this logic, it might apropos be entertaining to consider the following preposition: Do politicians in our country work? And if they do not, how can they understand, let alone give direction to, the dynamics of "work" that shapes, as it were, the "destiny" of the nation.

Politics draws its players from all walks of life. Lawyers, doctors, policemen, Ex-armymen, etc fill its ranks, not to mention the odd industrialist or performing artist. Most politicians however, are "loyal subjects" of one political party or the other. These worthies have built their political base since their college days. At the village level, their maturing years might just as well have seen them donning the role of henchmen for the dominant order or group in their community. So whereas among our present crop of politicians many have worked in the past, as farmers, lawyers and artists, many more have not at all! The latter have been psychologically nurtured by a system of reference that is at variance with us commoners, who have to get about our lives with a certain sense of inevitability : if no effort, then no success, resulting from which no money and therefore... just penury and the care of exacting circumstances.

These career politicians have never had to relate efforts to its correlative — award. They have garnered welfare for themselves like privileged overlords, mandated with the right, as it were, to run the first rake across a field ripe with the effort of those who actually till and nurture the produce that garners the nation's wealth.

The only craft that these politicians learn is the art and idiom of political communication. They can twist and shake their wobbly heads with the aplomb of a consummate stage artist, mesmerising the gullible into believing they are not men (and women) of straw; that a mere poke at their corpulent belly will not actually dissipate them into nothingness. The very nature of their socialisation undoes their ability to conceive, at the felt level of reference, of what actually entails work, and the value of the sum total of effort that common people put in to make the wheels of the nation turn.

We therefore have this class of people, a vast majority of whom has, at best, a rather philosophical notion of work ("we must work with dedication to get the country ahead"). And these very people are empowered to provide direction to people actually engaged in work. They lay down rules, create conditions and establish principles for almost all productive work in society. They also determine who shall work where and how many of which group can gain privileged entry into earmarked jobs, usually in the keep of this group.

Those who speak for a greater role for politicians (thus the state) in the governance of the country do not really care about the real "workers" in society. How can people who have never done a spot of honest work (pun intended) realise what work entails? Can they hear the beat of the hammer as it fashions an artefact shaped by the muscled strength of a toiling hand? Most importantly, can they even empathise living as they do in their ivory towers? The preposition holds regardless of whether they are born with silver or wooden spoons. Unless we ban career politicians and welcome those who have done honest work before taking up a political career, we will, as a nation, merely keep running to stay in the same place.

### SubQuestion No : 1

Q.1

(G)

What is 'the sense of inevitability' that common people realise that career politicians do not ?

- (1) Success is the outcome of effort put in.
- (2) The art and idiom of communicating politically.
- (3) That they are not men of straw.
- (4) That they can take the stage by storm.

Options

- 1. 1
- 2. 2
- 3. 3
- 4. 4

Question Type : **MCQ**

Question ID : **8782703291**

Option 1 ID : **87827012981**

Option 2 ID : **87827012982**

Option 3 ID : **87827012983**

Option 4 ID : **87827012984**

Status : **Answered**

Chosen Option : **1**



### Comprehension:

Read the passage carefully and answer the question that follow :

Post-industrial society has as its defining logic the idea of work. Progress is determined in terms of GDP and GNP and the primary determinant for gauging the contribution of individuals, institutions and organisations towards society is the output obtaining of the work they do within it. If we accept this logic, it might apropos be entertaining to consider the following preposition: Do politicians in our country work? And if they do not, how can they understand, let alone give direction to, the dynamics of "work" that shapes, as it were, the "destiny" of the nation.

Politics draws its players from all walks of life. Lawyers, doctors, policemen, Ex-armymen, etc fill its ranks, not to mention the odd industrialist or performing artist. Most politicians however, are "loyal subjects" of one political party or the other. These worthies have built their political base since their college days. At the village level, their maturing years might just as well have seen them donning the role of henchmen for the dominant order or group in their community. So whereas among our present crop of politicians many have worked in the past, as farmers, lawyers and artists, many more have not at all! The latter have been psychologically nurtured by a system of reference that is at variance with us commoners, who have to get about our lives with a certain sense of inevitability : if no effort, then no success, resulting from which no money and therefore... just penury and the care of exacting circumstances.

These career politicians have never had to relate efforts to its correlative — award. They have garnered welfare for themselves like privileged overlords, mandated with the right, as it were, to run the first rake across a field ripe with the effort of those who actually till and nurture the produce that garners the nation's wealth.

The only craft that these politicians learn is the art and idiom of political communication. They can twist and shake their wobbly heads with the aplomb of a consummate stage artist, mesmerising the gullible into believing they are not men (and women) of straw; that a mere poke at their corpulent belly will not actually dissipate them into nothingness. The very nature of their socialisation undoes their ability to conceive, at the felt level of reference, of what actually entails work, and the value of the sum total of effort that common people put in to make the wheels of the nation turn.

We therefore have this class of people, a vast majority of whom has, at best, a rather philosophical notion of work ("we must work with dedication to get the country ahead"). And these very people are empowered to provide direction to people actually engaged in work. They lay down rules, create conditions and establish principles for almost all productive work in society. They also determine who shall work where and how many of which group can gain privileged entry into earmarked jobs, usually in the keep of this group.

Those who speak for a greater role for politicians (thus the state) in the governance of the country do not really care about the real "workers" in society. How can people who have never done a spot of honest work (pun intended) realise what work entails? Can they hear the beat of the hammer as it fashions an artefact shaped by the muscled strength of a toiling hand? Most importantly, can they even empathise living as they do in their ivory towers? The preposition holds regardless of whether they are born with silver or wooden spoons. Unless we ban career politicians and welcome those who have done honest work before taking up a political career, we will, as a nation, merely keep running to stay in the same place.

### SubQuestion No : 2

Q.2

(I)

Those speaking for the politicians of the country do not really care about the real "workers" :

- (1) because they realise what working means.
- (2) because they have worked hard to build towers made of ivory.
- (3) because they produce and garner nation's wealth
- (4) because they have never related effort with reward.

Options

- 1. 1
- 2. 2
- 3. 3
- 4. 4

Question Type : **MCQ**

Question ID : **8782703293**

Option 1 ID : **87827012989**

Option 2 ID : **87827012990**

Option 3 ID : **87827012991**

Option 4 ID : **87827012992**

Status : **Answered**

Chosen Option : **4**





Teachingninja.in

### Comprehension:

Read the passage carefully and answer the question that follow :

Post-industrial society has as its defining logic the idea of work. Progress is determined in terms of GDP and GNP and the primary determinant for gauging the contribution of individuals, institutions and organisations towards society is the output obtaining of the work they do within it. If we accept this logic, it might apropos be entertaining to consider the following preposition: Do politicians in our country work? And if they do not, how can they understand, let alone give direction to, the dynamics of "work" that shapes, as it were, the "destiny" of the nation.

Politics draws its players from all walks of life. Lawyers, doctors, policemen, Ex-armymen, etc fill its ranks, not to mention the odd industrialist or performing artist. Most politicians however, are "loyal subjects" of one political party or the other. These worthies have built their political base since their college days. At the village level, their maturing years might just as well have seen them donning the role of henchmen for the dominant order or group in their community. So whereas among our present crop of politicians many have worked in the past, as farmers, lawyers and artists, many more have not at all! The latter have been psychologically nurtured by a system of reference that is at variance with us commoners, who have to get about our lives with a certain sense of inevitability : if no effort, then no success, resulting from which no money and therefore... just penury and the care of exacting circumstances.

These career politicians have never had to relate efforts to its correlative — award. They have garnered welfare for themselves like privileged overlords, mandated with the right, as it were, to run the first rake across a field ripe with the effort of those who actually till and nurture the produce that garners the nation's wealth.

The only craft that these politicians learn is the art and idiom of political communication. They can twist and shake their wobbly heads with the aplomb of a consummate stage artist, mesmerising the gullible into believing they are not men (and women) of straw; that a mere poke at their corpulent belly will not actually dissipate them into nothingness. The very nature of their socialisation undoes their ability to conceive, at the felt level of reference, of what actually entails work, and the value of the sum total of effort that common people put in to make the wheels of the nation turn.

We therefore have this class of people, a vast majority of whom has, at best, a rather philosophical notion of work ("we must work with dedication to get the country ahead"). And these very people are empowered to provide direction to people actually engaged in work. They lay down rules, create conditions and establish principles for almost all productive work in society. They also determine who shall work where and how many of which group can gain privileged entry into earmarked jobs, usually in the keep of this group.

Those who speak for a greater role for politicians (thus the state) in the governance of the country do not really care about the real "workers" in society. How can people who have never done a spot of honest work (pun intended) realise what work entails? Can they hear the beat of the hammer as it fashions an artefact shaped by the muscled strength of a toiling hand? Most importantly, can they even empathise living as they do in their ivory towers? The preposition holds regardless of whether they are born with silver or wooden spoons. Unless we ban career politicians and welcome those who have done honest work before taking up a political career, we will, as a nation, merely keep running to stay in the same place.

### SubQuestion No : 3

Q.3 (C)

"They have cultivated welfare for themselves like privileged overlords, mandated with the right, as it were, to run the first rake across a field ripe with the effort of those who actually till and nurture the produce that garners the nation's wealth". In this sentence, the writer uses which figure of speech to make her/his point :

- (1) Simile
- (2) Oxymoron
- (3) Metaphor
- (4) Poetry

Options 1. 1

2. 2

3. 3

4. 4

Question Type : MCQ

Question ID : 8782703287

Option 1 ID : 87827012965

Option 2 ID : 87827012966

Option 3 ID : 87827012967



Option 4 ID : 87827012968  
Status : **Answered**  
Chosen Option : 3



Teachingninja.in

### Comprehension:

Read the passage carefully and answer the question that follow :

Post-industrial society has as its defining logic the idea of work. Progress is determined in terms of GDP and GNP and the primary determinant for gauging the contribution of individuals, institutions and organisations towards society is the output obtaining of the work they do within it. If we accept this logic, it might apropos be entertaining to consider the following preposition: Do politicians in our country work? And if they do not, how can they understand, let alone give direction to, the dynamics of "work" that shapes, as it were, the "destiny" of the nation.

Politics draws its players from all walks of life. Lawyers, doctors, policemen, Ex-armymen, etc fill its ranks, not to mention the odd industrialist or performing artist. Most politicians however, are "loyal subjects" of one political party or the other. These worthies have built their political base since their college days. At the village level, their maturing years might just as well have seen them donning the role of henchmen for the dominant order or group in their community. So whereas among our present crop of politicians many have worked in the past, as farmers, lawyers and artists, many more have not at all! The latter have been psychologically nurtured by a system of reference that is at variance with us commoners, who have to get about our lives with a certain sense of inevitability : if no effort, then no success, resulting from which no money and therefore... just penury and the care of exacting circumstances.

These career politicians have never had to relate efforts to its correlative — award. They have garnered welfare for themselves like privileged overlords, mandated with the right, as it were, to run the first rake across a field ripe with the effort of those who actually till and nurture the produce that garners the nation's wealth.

The only craft that these politicians learn is the art and idiom of political communication. They can twist and shake their wobbly heads with the aplomb of a consummate stage artist, mesmerising the gullible into believing they are not men (and women) of straw; that a mere poke at their corpulent belly will not actually dissipate them into nothingness. The very nature of their socialisation undoes their ability to conceive, at the felt level of reference, of what actually entails work, and the value of the sum total of effort that common people put in to make the wheels of the nation turn.

We therefore have this class of people, a vast majority of whom has, at best, a rather philosophical notion of work ("we must work with dedication to get the country ahead"). And these very people are empowered to provide direction to people actually engaged in work. They lay down rules, create conditions and establish principles for almost all productive work in society. They also determine who shall work where and how many of which group can gain privileged entry into earmarked jobs, usually in the keep of this group.

Those who speak for a greater role for politicians (thus the state) in the governance of the country do not really care about the real "workers" in society. How can people who have never done a spot of honest work (pun intended) realise what work entails? Can they hear the beat of the hammer as it fashions an artefact shaped by the muscled strength of a toiling hand? Most importantly, can they even empathise living as they do in their ivory towers? The preposition holds regardless of whether they are born with silver or wooden spoons. Unless we ban career politicians and welcome those who have done honest work before taking up a political career, we will, as a nation, merely keep running to stay in the same place.

### SubQuestion No : 4

Q.4

(J)

Find the word in the passage that is similar in meaning to the phrase :

"to gradually become or make something become weaker until it disappears"

- (1) Apropos
- (2) Corpulent
- (3) Dissipate
- (4) Consummate

Options 1. 1

2. 2

3. 3

4. 4

Question Type : MCQ

Question ID : 8782703294

Option 1 ID : 87827012993

Option 2 ID : 87827012994

Option 3 ID : 87827012995

Option 4 ID : 87827012996

Status : Answered





Teachingninja.in



### Comprehension:

Read the passage carefully and answer the question that follow :

Post-industrial society has as its defining logic the idea of work. Progress is determined in terms of GDP and GNP and the primary determinant for gauging the contribution of individuals, institutions and organisations towards society is the output obtaining of the work they do within it. If we accept this logic, it might apropos be entertaining to consider the following preposition: Do politicians in our country work? And if they do not, how can they understand, let alone give direction to, the dynamics of "work" that shapes, as it were, the "destiny" of the nation.

Politics draws its players from all walks of life. Lawyers, doctors, policemen, Ex-armymen, etc fill its ranks, not to mention the odd industrialist or performing artist. Most politicians however, are "loyal subjects" of one political party or the other. These worthies have built their political base since their college days. At the village level, their maturing years might just as well have seen them donning the role of henchmen for the dominant order or group in their community. So whereas among our present crop of politicians many have worked in the past, as farmers, lawyers and artists, many more have not at all! The latter have been psychologically nurtured by a system of reference that is at variance with us commoners, who have to get about our lives with a certain sense of inevitability : if no effort, then no success, resulting from which no money and therefore... just penury and the care of exacting circumstances.

These career politicians have never had to relate efforts to its correlative — award. They have garnered welfare for themselves like privileged overlords, mandated with the right, as it were, to run the first rake across a field ripe with the effort of those who actually till and nurture the produce that garners the nation's wealth.

The only craft that these politicians learn is the art and idiom of political communication. They can twist and shake their wobbly heads with the aplomb of a consummate stage artist, mesmerising the gullible into believing they are not men (and women) of straw; that a mere poke at their corpulent belly will not actually dissipate them into nothingness. The very nature of their socialisation undoes their ability to conceive, at the felt level of reference, of what actually entails work, and the value of the sum total of effort that common people put in to make the wheels of the nation turn.

We therefore have this class of people, a vast majority of whom has, at best, a rather philosophical notion of work ("we must work with dedication to get the country ahead"). And these very people are empowered to provide direction to people actually engaged in work. They lay down rules, create conditions and establish principles for almost all productive work in society. They also determine who shall work where and how many of which group can gain privileged entry into earmarked jobs, usually in the keep of this group.

Those who speak for a greater role for politicians (thus the state) in the governance of the country do not really care about the real "workers" in society. How can people who have never done a spot of honest work (pun intended) realise what work entails? Can they hear the beat of the hammer as it fashions an artefact shaped by the muscled strength of a toiling hand? Most importantly, can they even empathise living as they do in their ivory towers? The preposition holds regardless of whether they are born with silver or wooden spoons. Unless we ban career politicians and welcome those who have done honest work before taking up a political career, we will, as a nation, merely keep running to stay in the same place.

### SubQuestion No : 5

Q.5

(F)

Which of the following appropriately defines certain politicians in their maturing years at the village level :

- (1) They were 'loyal subjects' of a political party.
- (2) They had built their apolitical base since their college days.
- (3) They worked two different professions to hone their skills.
- (4) They have been henchmen for dominant groups in their community.

Options 1. 1

2. 2

3. 3

4. 4

Question Type : MCQ

Question ID : 8782703290

Option 1 ID : 87827012977



Option 2 ID : 87827012978

Option 3 ID : 87827012979

Option 4 ID : 87827012980

Status : Answered

Chosen Option : 4



Teachingninja.in



Teachingninja.in

### Comprehension:

Read the passage carefully and answer the question that follow :

Post-industrial society has as its defining logic the idea of work. Progress is determined in terms of GDP and GNP and the primary determinant for gauging the contribution of individuals, institutions and organisations towards society is the output obtaining of the work they do within it. If we accept this logic, it might apropos be entertaining to consider the following preposition: Do politicians in our country work? And if they do not, how can they understand, let alone give direction to, the dynamics of "work" that shapes, as it were, the "destiny" of the nation.

Politics draws its players from all walks of life. Lawyers, doctors, policemen, Ex-armymen, etc fill its ranks, not to mention the odd industrialist or performing artist. Most politicians however, are "loyal subjects" of one political party or the other. These worthies have built their political base since their college days. At the village level, their maturing years might just as well have seen them donning the role of henchmen for the dominant order or group in their community. So whereas among our present crop of politicians many have worked in the past, as farmers, lawyers and artists, many more have not at all! The latter have been psychologically nurtured by a system of reference that is at variance with us commoners, who have to get about our lives with a certain sense of inevitability : if no effort, then no success, resulting from which no money and therefore... just penury and the care of exacting circumstances.

These career politicians have never had to relate efforts to its correlative — award. They have garnered welfare for themselves like privileged overlords, mandated with the right, as it were, to run the first rake across a field ripe with the effort of those who actually till and nurture the produce that garners the nation's wealth.

The only craft that these politicians learn is the art and idiom of political communication. They can twist and shake their wobbly heads with the aplomb of a consummate stage artist, mesmerising the gullible into believing they are not men (and women) of straw; that a mere poke at their corpulent belly will not actually dissipate them into nothingness. The very nature of their socialisation undoes their ability to conceive, at the felt level of reference, of what actually entails work, and the value of the sum total of effort that common people put in to make the wheels of the nation turn.

We therefore have this class of people, a vast majority of whom has, at best, a rather philosophical notion of work ("we must work with dedication to get the country ahead"). And these very people are empowered to provide direction to people actually engaged in work. They lay down rules, create conditions and establish principles for almost all productive work in society. They also determine who shall work where and how many of which group can gain privileged entry into earmarked jobs, usually in the keep of this group.

Those who speak for a greater role for politicians (thus the state) in the governance of the country do not really care about the real "workers" in society. How can people who have never done a spot of honest work (pun intended) realise what work entails? Can they hear the beat of the hammer as it fashions an artefact shaped by the muscled strength of a toiling hand? Most importantly, can they even empathise living as they do in their ivory towers? The preposition holds regardless of whether they are born with silver or wooden spoons. Unless we ban career politicians and welcome those who have done honest work before taking up a political career, we will, as a nation, merely keep running to stay in the same place.

### SubQuestion No : 6

Q.6 (K)

As per the writer, common people have no alternative but the work for their living. Is this assertion :

- (1) partly relevant
- (2) partly irrelevant
- (3) fully relevant
- (4) partly irrelevant

Options 1. 1

2. 2

3. 3

4. 4

Question Type : MCQ

Question ID : 8782703295

Option 1 ID : 87827012997

Option 2 ID : 87827012998

Option 3 ID : 87827012999

Option 4 ID : 87827013000

Status : Answered





Teachingninja.in



### Comprehension:

Read the passage carefully and answer the question that follow :

Post-industrial society has as its defining logic the idea of work. Progress is determined in terms of GDP and GNP and the primary determinant for gauging the contribution of individuals, institutions and organisations towards society is the output obtaining of the work they do within it. If we accept this logic, it might apropos be entertaining to consider the following preposition: Do politicians in our country work? And if they do not, how can they understand, let alone give direction to, the dynamics of "work" that shapes, as it were, the "destiny" of the nation.

Politics draws its players from all walks of life. Lawyers, doctors, policemen, Ex-armymen, etc fill its ranks, not to mention the odd industrialist or performing artist. Most politicians however, are "loyal subjects" of one political party or the other. These worthies have built their political base since their college days. At the village level, their maturing years might just as well have seen them donning the role of henchmen for the dominant order or group in their community. So whereas among our present crop of politicians many have worked in the past, as farmers, lawyers and artists, many more have not at all! The latter have been psychologically nurtured by a system of reference that is at variance with us commoners, who have to get about our lives with a certain sense of inevitability : if no effort, then no success, resulting from which no money and therefore... just penury and the care of exacting circumstances.

These career politicians have never had to relate efforts to its correlative — award. They have garnered welfare for themselves like privileged overlords, mandated with the right, as it were, to run the first rake across a field ripe with the effort of those who actually till and nurture the produce that garners the nation's wealth.

The only craft that these politicians learn is the art and idiom of political communication. They can twist and shake their wobbly heads with the aplomb of a consummate stage artist, mesmerising the gullible into believing they are not men (and women) of straw; that a mere poke at their corpulent belly will not actually dissipate them into nothingness. The very nature of their socialisation undoes their ability to conceive, at the felt level of reference, of what actually entails work, and the value of the sum total of effort that common people put in to make the wheels of the nation turn.

We therefore have this class of people, a vast majority of whom has, at best, a rather philosophical notion of work ("we must work with dedication to get the country ahead"). And these very people are empowered to provide direction to people actually engaged in work. They lay down rules, create conditions and establish principles for almost all productive work in society. They also determine who shall work where and how many of which group can gain privileged entry into earmarked jobs, usually in the keep of this group.

Those who speak for a greater role for politicians (thus the state) in the governance of the country do not really care about the real "workers" in society. How can people who have never done a spot of honest work (pun intended) realise what work entails? Can they hear the beat of the hammer as it fashions an artefact shaped by the muscled strength of a toiling hand? Most importantly, can they even empathise living as they do in their ivory towers? The preposition holds regardless of whether they are born with silver or wooden spoons. Unless we ban career politicians and welcome those who have done honest work before taking up a political career, we will, as a nation, merely keep running to stay in the same place.

### SubQuestion No : 7

Q.7 (A) According to the writer :

- (1) Most politicians are busy, engaged in other work.
- (2) Some politicians care more about work than the common people do.
- (3) No work can get done in this country unless politicians take an active interest in society.
- (4) Most politicians do not posses a background of having done actual work.

Options 1. 1

2. 2

3. 3

4. 4

Question Type : MCQ

Question ID : 8782703286

Option 1 ID : 87827012961

Option 2 ID : 87827012962

Option 3 ID : 87827012963

Option 4 ID : 87827012964

Status : Answered

Chosen Option : 3





Teachingninja.in

### Comprehension:

Read the passage carefully and answer the question that follow :

Post-industrial society has as its defining logic the idea of work. Progress is determined in terms of GDP and GNP and the primary determinant for gauging the contribution of individuals, institutions and organisations towards society is the output obtaining of the work they do within it. If we accept this logic, it might apropos be entertaining to consider the following preposition: Do politicians in our country work? And if they do not, how can they understand, let alone give direction to, the dynamics of "work" that shapes, as it were, the "destiny" of the nation.

Politics draws its players from all walks of life. Lawyers, doctors, policemen, Ex-armymen, etc fill its ranks, not to mention the odd industrialist or performing artist. Most politicians however, are "loyal subjects" of one political party or the other. These worthies have built their political base since their college days. At the village level, their maturing years might just as well have seen them donning the role of henchmen for the dominant order or group in their community. So whereas among our present crop of politicians many have worked in the past, as farmers, lawyers and artists, many more have not at all! The latter have been psychologically nurtured by a system of reference that is at variance with us commoners, who have to get about our lives with a certain sense of inevitability : if no effort, then no success, resulting from which no money and therefore... just penury and the care of exacting circumstances.

These career politicians have never had to relate efforts to its correlative — award. They have garnered welfare for themselves like privileged overlords, mandated with the right, as it were, to run the first rake across a field ripe with the effort of those who actually till and nurture the produce that garners the nation's wealth.

The only craft that these politicians learn is the art and idiom of political communication. They can twist and shake their wobbly heads with the aplomb of a consummate stage artist, mesmerising the gullible into believing they are not men (and women) of straw; that a mere poke at their corpulent belly will not actually dissipate them into nothingness. The very nature of their socialisation undoes their ability to conceive, at the felt level of reference, of what actually entails work, and the value of the sum total of effort that common people put in to make the wheels of the nation turn.

We therefore have this class of people, a vast majority of whom has, at best, a rather philosophical notion of work ("we must work with dedication to get the country ahead"). And these very people are empowered to provide direction to people actually engaged in work. They lay down rules, create conditions and establish principles for almost all productive work in society. They also determine who shall work where and how many of which group can gain privileged entry into earmarked jobs, usually in the keep of this group.

Those who speak for a greater role for politicians (thus the state) in the governance of the country do not really care about the real "workers" in society. How can people who have never done a spot of honest work (pun intended) realise what work entails? Can they hear the beat of the hammer as it fashions an artefact shaped by the muscled strength of a toiling hand? Most importantly, can they even empathise living as they do in their ivory towers? The preposition holds regardless of whether they are born with silver or wooden spoons. Unless we ban career politicians and welcome those who have done honest work before taking up a political career, we will, as a nation, merely keep running to stay in the same place.

### SubQuestion No : 8

Q.8

(D)

Which of the following statements best describes what the writer means by the phrase "art and idiom of political communication" :

- (1) talking Idiomatically
- (2) talking only about politics
- (3) Communicating not in the language of ordinary people but with the shrewd oratory of politics
- (4) using artistic language to describe politics

Options 1. 1

2. 2

3. 3

4. 4

Question Type : MCQ

Question ID : 8782703288

Option 1 ID : 87827012969

Option 2 ID : 87827012970

Option 3 ID : 87827012971

Option 4 ID : 87827012972





Teachingninja.in



### Comprehension:

Read the passage carefully and answer the question that follow :

Post-industrial society has as its defining logic the idea of work. Progress is determined in terms of GDP and GNP and the primary determinant for gauging the contribution of individuals, institutions and organisations towards society is the output obtaining of the work they do within it. If we accept this logic, it might apropos be entertaining to consider the following preposition: Do politicians in our country work? And if they do not, how can they understand, let alone give direction to, the dynamics of "work" that shapes, as it were, the "destiny" of the nation.

Politics draws its players from all walks of life. Lawyers, doctors, policemen, Ex-armymen, etc fill its ranks, not to mention the odd industrialist or performing artist. Most politicians however, are "loyal subjects" of one political party or the other. These worthies have built their political base since their college days. At the village level, their maturing years might just as well have seen them donning the role of henchmen for the dominant order or group in their community. So whereas among our present crop of politicians many have worked in the past, as farmers, lawyers and artists, many more have not at all! The latter have been psychologically nurtured by a system of reference that is at variance with us commoners, who have to get about our lives with a certain sense of inevitability : if no effort, then no success, resulting from which no money and therefore... just penury and the care of exacting circumstances.

These career politicians have never had to relate efforts to its correlative — award. They have garnered welfare for themselves like privileged overlords, mandated with the right, as it were, to run the first rake across a field ripe with the effort of those who actually till and nurture the produce that garners the nation's wealth.

The only craft that these politicians learn is the art and idiom of political communication. They can twist and shake their wobbly heads with the aplomb of a consummate stage artist, mesmerising the gullible into believing they are not men (and women) of straw; that a mere poke at their corpulent belly will not actually dissipate them into nothingness. The very nature of their socialisation undoes their ability to conceive, at the felt level of reference, of what actually entails work, and the value of the sum total of effort that common people put in to make the wheels of the nation turn.

We therefore have this class of people, a vast majority of whom has, at best, a rather philosophical notion of work ("we must work with dedication to get the country ahead"). And these very people are empowered to provide direction to people actually engaged in work. They lay down rules, create conditions and establish principles for almost all productive work in society. They also determine who shall work where and how many of which group can gain privileged entry into earmarked jobs, usually in the keep of this group.

Those who speak for a greater role for politicians (thus the state) in the governance of the country do not really care about the real "workers" in society. How can people who have never done a spot of honest work (pun intended) realise what work entails? Can they hear the beat of the hammer as it fashions an artefact shaped by the muscled strength of a toiling hand? Most importantly, can they even empathise living as they do in their ivory towers? The preposition holds regardless of whether they are born with silver or wooden spoons. Unless we ban career politicians and welcome those who have done honest work before taking up a political career, we will, as a nation, merely keep running to stay in the same place.

### SubQuestion No : 9

Q.9

(E)

The writer contends that we :

- (1) Need to improve the quality of our career politicians
- (2) Need to get rid of career politicians altogether
- (3) Need to ban politics
- (4) Need to ban democracy

Options 1. 1

2. 2

3. 3

4. 4

Question Type : **MCQ**

Question ID : **8782703289**

Option 1 ID : **87827012973**

Option 2 ID : **87827012974**

Option 3 ID : **87827012975**

Option 4 ID : **87827012976**

Status : **Answered**

Chosen Option : **2**



### Comprehension:

Read the passage carefully and answer the question that follow :

Post-industrial society has as its defining logic the idea of work. Progress is determined in terms of GDP and GNP and the primary determinant for gauging the contribution of individuals, institutions and organisations towards society is the output obtaining of the work they do within it. If we accept this logic, it might apropos be entertaining to consider the following preposition: Do politicians in our country work? And if they do not, how can they understand, let alone give direction to, the dynamics of "work" that shapes, as it were, the "destiny" of the nation.

Politics draws its players from all walks of life. Lawyers, doctors, policemen, Ex-armymen, etc fill its ranks, not to mention the odd industrialist or performing artist. Most politicians however, are "loyal subjects" of one political party or the other. These worthies have built their political base since their college days. At the village level, their maturing years might just as well have seen them donning the role of henchmen for the dominant order or group in their community. So whereas among our present crop of politicians many have worked in the past, as farmers, lawyers and artists, many more have not at all! The latter have been psychologically nurtured by a system of reference that is at variance with us commoners, who have to get about our lives with a certain sense of inevitability : if no effort, then no success, resulting from which no money and therefore... just penury and the care of exacting circumstances.

These career politicians have never had to relate efforts to its correlative — award. They have garnered welfare for themselves like privileged overlords, mandated with the right, as it were, to run the first rake across a field ripe with the effort of those who actually till and nurture the produce that garners the nation's wealth.

The only craft that these politicians learn is the art and idiom of political communication. They can twist and shake their wobbly heads with the aplomb of a consummate stage artist, mesmerising the gullible into believing they are not men (and women) of straw; that a mere poke at their corpulent belly will not actually dissipate them into nothingness. The very nature of their socialisation undoes their ability to conceive, at the felt level of reference, of what actually entails work, and the value of the sum total of effort that common people put in to make the wheels of the nation turn.

We therefore have this class of people, a vast majority of whom has, at best, a rather philosophical notion of work ("we must work with dedication to get the country ahead"). And these very people are empowered to provide direction to people actually engaged in work. They lay down rules, create conditions and establish principles for almost all productive work in society. They also determine who shall work where and how many of which group can gain privileged entry into earmarked jobs, usually in the keep of this group.

Those who speak for a greater role for politicians (thus the state) in the governance of the country do not really care about the real "workers" in society. How can people who have never done a spot of honest work (pun intended) realise what work entails? Can they hear the beat of the hammer as it fashions an artefact shaped by the muscled strength of a toiling hand? Most importantly, can they even empathise living as they do in their ivory towers? The preposition holds regardless of whether they are born with silver or wooden spoons. Unless we ban career politicians and welcome those who have done honest work before taking up a political career, we will, as a nation, merely keep running to stay in the same place.

### SubQuestion No : 10

Q.10

(H)

The commoners, who work hard :

- (1) Have this political notion and can hear the beat of the hammer.
- (2) Create a philosophical notion of work for the welfare of the country.
- (3) Have never empathised with the muscled strength of a toiling hand.
- (4) Have earmarked jobs for privileges and gains.

Options 1. 1

2. 2

3. 3

4. 4

Question Type : MCQ

Question ID : 8782703292

Option 1 ID : 87827012985

Option 2 ID : 87827012986



Option 3 ID : 87827012987  
Option 4 ID : 87827012988  
Status : Answered  
Chosen Option : 2

**Q.11** Choose the correct option to fill in the blank :  
His wife thinks he's up to something, but I'm sure she's barking up the wrong \_\_\_\_\_.

- (1) clue
- (2) house
- (3) flea
- (4) tree

**Options** 1. 1  
2. 2  
3. 3  
4. 4

Question Type : MCQ  
Question ID : 8782703304  
Option 1 ID : 87827013033  
Option 2 ID : 87827013034  
Option 3 ID : 87827013035  
Option 4 ID : 87827013036  
Status : Answered  
Chosen Option : 4

**Q.12** Choose the correct word to fill in the blank :  
Her children gave her gold earrings on the \_\_\_\_\_ of her fiftieth birthday.

- (1) occasion
- (2) ocassion
- (3) occassion
- (4) occasiond

**Options** 1. 1  
2. 2  
3. 3  
4. 4

Question Type : MCQ  
Question ID : 8782703296  
Option 1 ID : 87827013001  
Option 2 ID : 87827013002  
Option 3 ID : 87827013003  
Option 4 ID : 87827013004  
Status : Answered  
Chosen Option : 1



Q.13 Choose the correct word to fill in the blank :  
She will buy meat today and \_\_\_\_\_ it herself.

- (1) mince
- (2) minse
- (3) mints
- (4) mins

Options 1. 1  
2. 2  
3. 3  
4. 4

Question Type : **MCQ**  
Question ID : 8782703297  
Option 1 ID : 87827013005  
Option 2 ID : 87827013006  
Option 3 ID : 87827013007  
Option 4 ID : 87827013008  
Status : **Answered**  
Chosen Option : 1

Q.14 Rearrange the following sentences in a logical order to form a coherent paragraph :

- A. Historians are scholars who study the past.
- B. So historians are in a sence like detectives, who use all these resources to find out about our pasts.
- C. Once sources are found, learning about the past becomes an adventure, as they reconstruct it bit by bit.
- D. They often use the word 'source' to refer to the information obtained from manuscripts, inscriptions and archeology.

- (1) D,B,C,A
- (2) A,D,C,B
- (3) D,C,A,D
- (4) C,B,D,A

Options 1. 1  
2. 2  
3. 3  
4. 4

Question Type : **MCQ**  
Question ID : 8782703301  
Option 1 ID : 87827013021  
Option 2 ID : 87827013022  
Option 3 ID : 87827013023  
Option 4 ID : 87827013024  
Status : **Answered**  
Chosen Option : 2

Q.15 Spot the error in the following sentence :

Most of Egypt / is a dry desert / accept for the lands / along the river Nile.  
(A) (B) (C) (D)

(1) A

(2) B

(3) C

(4) D

Options 1. 1

2. 2

3. 3

4. 4

Question Type : MCQ

Question ID : 8782703303

Option 1 ID : 87827013029

Option 2 ID : 87827013030

Option 3 ID : 87827013031

Option 4 ID : 87827013032

Status : Answered

Chosen Option : 3

Q.16 Choose the correct option to fill in the blank:

We have to go back to the \_\_\_\_\_ and ask ourselves what our priorities are.

(1) chalkboard

(2) drawing board

(3) drawing sheets

(4) blue prints

Options 1. 1

2. 2

3. 3

4. 4

Question Type : MCQ

Question ID : 8782703305

Option 1 ID : 87827013037

Option 2 ID : 87827013038

Option 3 ID : 87827013039

Option 4 ID : 87827013040

Status : Answered

Chosen Option : 2



Q.17 Change into the Passive Voice :  
He satisfied all.

- (1) All were satisfied with him.
- (2) All was satisfied because of him.
- (3) All had been satisfied.
- (4) All could be satisfied by him.

Options 1. 1  
2. 2  
3. 3  
4. 4

Question Type : **MCQ**  
Question ID : 8782703308  
Option 1 ID : 87827013049  
Option 2 ID : 87827013050  
Option 3 ID : 87827013051  
Option 4 ID : 87827013052  
Status : **Answered**  
Chosen Option : 1

Q.18 Change into the Passive Voice :  
Why have you broken the phone ?

- (1) Why have the phone been broken by ?
- (2) Why has the phone been broken by you ?
- (3) Why had the phone been broken by you ?
- (4) Why were the phone been broken by you ?

Options 1. 1  
2. 2  
3. 3  
4. 4

Question Type : **MCQ**  
Question ID : 8782703307  
Option 1 ID : 87827013045  
Option 2 ID : 87827013046  
Option 3 ID : 87827013047  
Option 4 ID : 87827013048  
Status : **Answered**  
Chosen Option : 2

**Q.19** Choose the most appropriate phrase to fill in the blank :

\_\_\_\_\_ come to my rescue, I would surely have been killed by the tiger.

- (1) Had she not
- (2) If she did not
- (3) Having not
- (4) She having not

**Options** 1. 1

2. 2

3. 3

4. 4

Question Type : **MCQ**

Question ID : **8782703298**

Option 1 ID : **87827013009**

Option 2 ID : **87827013010**

Option 3 ID : **87827013011**

Option 4 ID : **87827013012**

Status : **Answered**

Chosen Option : 1

**Q.20** Choose the most appropriate word to fill in the blank :

Owing to their unruly behaviour, few members of the hockey team were \_\_\_\_\_ from the team selected for the tournament.

- (1) conscripted
- (2) outlawed
- (3) exempted
- (4) excluded

**Options** 1. 1

2. 2

3. 3

4. 4

Question Type : **MCQ**

Question ID : **8782703299**

Option 1 ID : **87827013013**

Option 2 ID : **87827013014**

Option 3 ID : **87827013015**

Option 4 ID : **87827013016**

Status : **Answered**

Chosen Option : 1



**Q.21** Fill in the blanks by choosing the most appropriate option :

The causes of poverty lie \_\_\_\_\_ the institutional and social factors that mark the life \_\_\_\_\_ the poor.

- (1) in, of
- (2) at, about
- (3) along, of
- (4) in, for

- Options**
- 1. 1
  - 2. 2
  - 3. 3
  - 4. 4

Question Type : **MCQ**

Question ID : **8782703300**

Option 1 ID : **87827013017**

Option 2 ID : **87827013018**

Option 3 ID : **87827013019**

Option 4 ID : **87827013020**

Status : **Answered**

Chosen Option : **3**

**Q.22** Spot the error in the following sentence :

One of the / most famous / Neolithic site / was found in Turkey.  
(A) / (B) / (C) / (D)

- (1) A
- (2) B
- (3) C
- (4) D

- Options**
- 1. 1
  - 2. 2
  - 3. 3
  - 4. 4

Question Type : **MCQ**

Question ID : **8782703302**

Option 1 ID : **87827013025**

Option 2 ID : **87827013026**

Option 3 ID : **87827013027**

Option 4 ID : **87827013028**

Status : **Answered**

Chosen Option : **3**

Q.23 Change into Indirect Speech :  
Pariniti said to Sarla, "Remember to take your pill."

- (1) Pariniti reminded Sarla take your pill.
- (2) Pariniti reminded Sarla remember to take your pill.
- (3) Pariniti reminded Sarla to take her pill.
- (4) Pariniti told to Sarla that she should remember and take her pill.

Options 1. 1  
2. 2  
3. 3  
4. 4

Question Type : MCQ  
Question ID : 8782703315  
Option 1 ID : 87827013077  
Option 2 ID : 87827013078  
Option 3 ID : 87827013079  
Option 4 ID : 87827013080  
Status : Answered  
Chosen Option : 3

Q.24 Change into Indirect Narration :  
Ramu said, "No, I can't come with you."

- (1) Ramu told that he could not come.
- (2) Ramu told that he could not come with me.
- (3) Ramu told that he will not come with me.
- (4) Ramu said that no, he can't come with you.

Options 1. 1  
2. 2  
3. 3  
4. 4

Question Type : MCQ  
Question ID : 8782703311  
Option 1 ID : 87827013061  
Option 2 ID : 87827013062  
Option 3 ID : 87827013063  
Option 4 ID : 87827013064  
Status : Answered  
Chosen Option : 2



**Q.25** Change into Indirect Narration :

My mother said, "I am going to the office, where are you going ?"

- (1) My mother said that she was going to the office and wanted to know where I was going.
- (2) My mother told me she was going to the office and asked me about my whereabouts.
- (3) My mother said she was going to the office and asked me when I am going.
- (4) My mother asked me where I was going and said that she was going to the office.

**Options** 1. 1

2. 2

3. 3

4. 4

Question Type : **MCQ**

Question ID : **8782703312**

Option 1 ID : **87827013065**

Option 2 ID : **87827013066**

Option 3 ID : **87827013067**

Option 4 ID : **87827013068**

Status : **Answered**

Chosen Option : 1

**Q.26** Change into Indirect Narration :

He said, I may attend the seminar.

- (1) He said that he might attend the seminar.
- (2) He told that he would attend the seminar.
- (3) He said that he could attend the seminar.
- (4) He retorted that he may attend the seminar.

**Options** 1. 1

2. 2

3. 3

4. 4

Question Type : **MCQ**

Question ID : **8782703313**

Option 1 ID : **87827013069**

Option 2 ID : **87827013070**

Option 3 ID : **87827013071**

Option 4 ID : **87827013072**

Status : **Answered**

Chosen Option : 1



**Q.27** Change into the Passive Voice :

She performed his symphony for the first time last week.

- (1) His symphony was performed by her for the first time last week.
- (2) His symphony has been performed for the first time in the past week.
- (3) His symphony was performed by her last week only.
- (4) His symphony had been performed by her the last week for the first time.

**Options**

- 1. 1
- 2. 2
- 3. 3
- 4. 4

Question Type : **MCQ**

Question ID : **8782703309**

Option 1 ID : **87827013053**

Option 2 ID : **87827013054**

Option 3 ID : **87827013055**

Option 4 ID : **87827013056**

Status : **Answered**

Chosen Option : **1**

**Q.28** Change into Indirect Narration:

She says, "I am a scientist."

- (1) She said that she is a scientist.
- (2) She says that she is a scientist.
- (3) She told she is a scientist.
- (4) She reported of being a scientist.

**Options**

- 1. 1
- 2. 2
- 3. 3
- 4. 4

Question Type : **MCQ**

Question ID : **8782703314**

Option 1 ID : **87827013073**

Option 2 ID : **87827013074**

Option 3 ID : **87827013075**

Option 4 ID : **87827013076**

Status : **Answered**

Chosen Option : **2**



Q.29 Change into the Active Voice :

Have this lock broken.

- (1) Let this lock be broken.
- (2) Break this lock.
- (3) The lock must be broken
- (4) Get someone to break this lock.

Options

- 1. 1
- 2. 2
- 3. 3
- 4. 4

Question Type : MCQ

Question ID : 8782703306

Option 1 ID : 87827013041

Option 2 ID : 87827013042

Option 3 ID : 87827013043

Option 4 ID : 87827013044

Status : Answered

Chosen Option : 2

Q.30 Change the voice in the following sentence by choosing the correct option to fill in the blank :

Active : Look ! They have painted the door

Passive : Look ! The door \_\_\_\_\_ by them.

- (1) has being painted
- (2) had been painted
- (3) has been painted
- (4) is being painted

Options

- 1. 1
- 2. 2
- 3. 3
- 4. 4

Question Type : MCQ

Question ID : 8782703310

Option 1 ID : 87827013057

Option 2 ID : 87827013058

Option 3 ID : 87827013059

Option 4 ID : 87827013060

Status : Answered

Chosen Option : 3



**Comprehension:**

Fill in the blank by choosing the appropriate option:

Sometimes, people decide (i)\_\_\_\_\_ the basis of what is found (ii)\_\_\_\_\_ the skeleton. For instance, (iii)\_\_\_\_\_ a skeleton is found with jewellery, it is (iv)\_\_\_\_\_ to be that of a woman. However, there are problems with this. (v)\_\_\_\_\_, men also wore ornaments.

**SubQuestion No : 31**

- Q.31** (v)
- (1) Often
  - (2) Always
  - (3) Since
  - (4) As

- Options**
- 1. 1
  - 2. 2
  - 3. 3
  - 4. 4

Question Type : **MCQ**  
Question ID : **8782703321**  
Option 1 ID : **87827013097**  
Option 2 ID : **87827013098**  
Option 3 ID : **87827013099**  
Option 4 ID : **87827013100**  
Status : **Answered**  
Chosen Option : **3**

**Comprehension:**

Fill in the blank by choosing the appropriate option:

Sometimes, people decide (i)\_\_\_\_\_ the basis of what is found (ii)\_\_\_\_\_ the skeleton. For instance, (iii)\_\_\_\_\_ a skeleton is found with jewellery, it is (iv)\_\_\_\_\_ to be that of a woman. However, there are problems with this. (v)\_\_\_\_\_, men also wore ornaments.

**SubQuestion No : 32**

- Q.32** (iii)
- (1) that
  - (2) where
  - (3) were
  - (4) if

- Options**
- 1. 1
  - 2. 2
  - 3. 3
  - 4. 4

Question Type : **MCQ**  
Question ID : **8782703319**  
Option 1 ID : **87827013089**  
Option 2 ID : **87827013090**  
Option 3 ID : **87827013091**  
Option 4 ID : **87827013092**  
Status : **Answered**  
Chosen Option : **1**

**Comprehension:**

Fill in the blank by choosing the appropriate option:

Sometimes, people decide (i)\_\_\_\_\_ the basis of what is found (ii)\_\_\_\_\_ the skeleton. For instance, (iii)\_\_\_\_\_ a skeleton is found with jewellery, it is (iv)\_\_\_\_\_ to be that of a woman. However, there are problems with this. (v)\_\_\_\_\_, men also wore ornaments.

**SubQuestion No : 33**

- Q.33** (ii)
- (1) with
  - (2) for
  - (3) about
  - (4) by

- Options**
- 1. 1
  - 2. 2
  - 3. 3
  - 4. 4

Question Type : **MCQ**  
Question ID : **8782703318**  
Option 1 ID : **87827013085**  
Option 2 ID : **87827013086**  
Option 3 ID : **87827013087**  
Option 4 ID : **87827013088**  
Status : **Answered**  
Chosen Option : **1**

**Comprehension:**

Fill in the blank by choosing the appropriate option:

Sometimes, people decide (i)\_\_\_\_\_ the basis of what is found (ii)\_\_\_\_\_ the skeleton. For instance, (iii)\_\_\_\_\_ a skeleton is found with jewellery, it is (iv)\_\_\_\_\_ to be that of a woman. However, there are problems with this. (v)\_\_\_\_\_, men also wore ornaments.

**SubQuestion No : 34**

- Q.34** (i)
- (1) in
  - (2) on
  - (3) for
  - (4) that

- Options**
- 1. 1
  - 2. 2
  - 3. 3
  - 4. 4

Question Type : **MCQ**  
Question ID : **8782703317**  
Option 1 ID : **87827013081**  
Option 2 ID : **87827013082**  
Option 3 ID : **87827013083**  
Option 4 ID : **87827013084**  
Status : **Answered**  
Chosen Option : **2**

**Comprehension:**

Fill in the blank by choosing the appropriate option:

Sometimes, people decide (i)\_\_\_\_\_ the basis of what is found (ii)\_\_\_\_\_ the skeleton. For instance, (iii)\_\_\_\_\_ a skeleton is found with jewellery, it is (iv)\_\_\_\_\_ to be that of a woman. However, there are problems with this. (v)\_\_\_\_\_, men also wore ornaments.

**SubQuestion No : 35**

- Q.35** (iv)
- (1) everytime thought
  - (2) forever thought
  - (3) sometimes thought
  - (4) never thought

- Options**
- 1. 1
  - 2. 2
  - 3. 3
  - 4. 4

Question Type : **MCQ**  
Question ID : **8782703320**  
Option 1 ID : **87827013093**  
Option 2 ID : **87827013094**  
Option 3 ID : **87827013095**  
Option 4 ID : **87827013096**  
Status : **Answered**  
Chosen Option : **1**

**Q.36** Choose the word similar in meaning to the given word :  
'INTERPOLATE'

- (1) Insert
- (2) Investigate
- (3) Clarify
- (4) Reverse

- Options**
- 1. 1
  - 2. 2
  - 3. 3
  - 4. 4

Question Type : **MCQ**  
Question ID : **8782703326**  
Option 1 ID : **87827013117**  
Option 2 ID : **87827013118**  
Option 3 ID : **87827013119**  
Option 4 ID : **87827013120**  
Status : **Answered**  
Chosen Option : **2**

**Q.37** Spot the error the following sentence :

During the winter session / the Lower House witness / heated debates on the issue /  
A B C  
of women's representation in Parliament  
D

- (1) A  
(2) B  
(3) C  
(4) D

(2) B

(3) C

(4) D

### Options 1. 1

2.2

3. 3

4.4

Question Type : **MCQ**

Question ID : 8782703331

Option 1 ID : 87827013137

Option 2 ID : 87827013138

Option 3 ID : 87827013139

Option 4 ID : 87827013140

Status : **Answered**

Chosen Option : **2**

**Q.38** Fill in the blanks to make the sentence meaningful :

cold.

- (1) affects ; effect  
(2) affect ; effects  
(3) afects ; effects  
(4) affects ; effected

(2) affect ; effects

(3) affects ; effects

(4) affects ; effected

### Options 1. 1

2.2

### 3.3

## 4.4

Question Type : **MCQ**

Question ID : 8782703330

Option 1 ID : 87827013133

Option 2 ID : 87827013134

Option 3 ID : 87827013135

Option 4 ID : 87827013136

Status : **Answered**

Chosen Option : **1**

**Q.39** Complete the following sentence by choosing the most appropriate question tag :

You will mind your business, \_\_\_\_\_ ?

- (1) don't you
- (2) isn't you
- (3) can't you
- (4) won't you

**Options** 1. 1  
2. 2  
3. 3  
4. 4

Question Type : **MCQ**  
Question ID : 8782703327  
Option 1 ID : 87827013121  
Option 2 ID : 87827013122  
Option 3 ID : 87827013123  
Option 4 ID : 87827013124  
Status : **Answered**  
Chosen Option : 4

**Q.40** Choose the word which is opposite in meaning to the given word :

'UNCOUTH'

- (1) eloquent
- (2) elegant
- (3) textured
- (4) dishevelled

**Options** 1. 1  
2. 2  
3. 3  
4. 4

Question Type : **MCQ**  
Question ID : 8782703323  
Option 1 ID : 87827013105  
Option 2 ID : 87827013106  
Option 3 ID : 87827013107  
Option 4 ID : 87827013108  
Status : **Answered**  
Chosen Option : 4



**Q.41** Fill in the blank with the correct option :

I \_\_\_\_\_ languidly in my bed last evening as it \_\_\_\_\_ continuously.

- (1) laid, had been raining
- (2) lied, was raining
- (3) lied, had been raining
- (4) lay, was raining

**Options**

- 1. 1
- 2. 2
- 3. 3
- 4. 4

Question Type : **MCQ**

Question ID : **8782703333**

Option 1 ID : **87827013145**

Option 2 ID : **87827013146**

Option 3 ID : **87827013147**

Option 4 ID : **87827013148**

Status : **Answered**

Chosen Option : **2**

**Q.42** Choose the most appropriate word to fill in the blank :

I am proud \_\_\_\_\_ my heritage.

- (1) by
- (2) with
- (3) of
- (4) in

**Options**

- 1. 1
- 2. 2
- 3. 3
- 4. 4

Question Type : **MCQ**

Question ID : **8782703335**

Option 1 ID : **87827013153**

Option 2 ID : **87827013154**

Option 3 ID : **87827013155**

Option 4 ID : **87827013156**

Status : **Answered**

Chosen Option : **3**



Q.43 Choose the most appropriate word to fill in the blank :

The three sisters always quarrelled \_\_\_\_\_ themselves.

- (1) to
- (2) between
- (3) for
- (4) amongst

Options

- 1. 1
- 2. 2
- 3. 3
- 4. 4

Question Type : MCQ

Question ID : 8782703336

Option 1 ID : 87827013157

Option 2 ID : 87827013158

Option 3 ID : 87827013159

Option 4 ID : 87827013160

Status : Answered

Chosen Option : 4

<https://t.me/UPDATXAMS>

Q.44 Choose the word opposite in meaning to the given word :

'ENERVATE'

- (1) Aggravate
- (2) Compose
- (3) Strengthen
- (4) Control

Options

- 1. 1
- 2. 2
- 3. 3
- 4. 4

Question Type : MCQ

Question ID : 8782703322

Option 1 ID : 87827013101

Option 2 ID : 87827013102

Option 3 ID : 87827013103

Option 4 ID : 87827013104

Status : Answered

Chosen Option : 2



Q.45 Find the part of the following sentence that has an error :  
The Principal along with other teachers are in a meeting.

- (1) The Principal along with
- (2) other teachers are
- (3) in a meeting
- (4) No error

Options 1. 1  
2. 2  
3. 3  
4. 4

Question Type : **MCQ**  
Question ID : 8782703332  
Option 1 ID : 87827013141  
Option 2 ID : 87827013142  
Option 3 ID : 87827013143  
Option 4 ID : 87827013144  
Status : **Answered**  
Chosen Option : 1

Q.46 Choose the wrongly spelt word :

- (1) Achieve
- (2) Receive
- (3) Quotidion
- (4) Perambulate

Options 1. 1  
2. 2  
3. 3  
4. 4

Question Type : **MCQ**  
Question ID : 8782703329  
Option 1 ID : 87827013129  
Option 2 ID : 87827013130  
Option 3 ID : 87827013131  
Option 4 ID : 87827013132  
Status : **Answered**  
Chosen Option : 4

Q.47 Choose the most appropriate word to fill in the blank:  
She tried her best; \_\_\_\_\_, she couldn't succeed.

- (1) besides
- (2) in case
- (3) however
- (4) as long as

Options 1. 1  
2. 2  
3. 3  
4. 4

Question Type : **MCQ**  
Question ID : 8782703334  
Option 1 ID : 87827013149  
Option 2 ID : 87827013150  
Option 3 ID : 87827013151  
Option 4 ID : 87827013152  
Status : **Answered**  
Chosen Option : 3

Q.48 Complete the following sentence by choosing the most appropriate question tag:  
I will receive complete details about the projects, \_\_\_\_\_ ?

- (1) aren't I ?
- (2) amn't I ?
- (3) won't I ?
- (4) Shouldn't I ?

Options 1. 1  
2. 2  
3. 3  
4. 4

Question Type : **MCQ**  
Question ID : 8782703328  
Option 1 ID : 87827013125  
Option 2 ID : 87827013126  
Option 3 ID : 87827013127  
Option 4 ID : 87827013128  
Status : **Answered**  
Chosen Option : 3



**Q.49** Choose the most appropriate synonym for the following word from the given options :

'EXCEPTIONAL'

- (1) Vindicate
- (2) Extraordinary
- (3) Elegant
- (4) Dainty

**Options** 1. 1

2. 2

3. 3

4. 4

Question Type : **MCQ**

Question ID : **8782703325**

Option 1 ID : **87827013113**

Option 2 ID : **87827013114**

Option 3 ID : **87827013115**

Option 4 ID : **87827013116**

Status : **Answered**

Chosen Option : **2**

**Q.50** Choose the most appropriate antonym for the following from the given options :

'ADJACENT'

- (1) Remote
- (2) Beside
- (3) Nearby
- (4) Proximate

**Options** 1. 1

2. 2

3. 3

4. 4

Question Type : **MCQ**

Question ID : **8782703324**

Option 1 ID : **87827013109**

Option 2 ID : **87827013110**

Option 3 ID : **87827013111**

Option 4 ID : **87827013112**

Status : **Answered**

Chosen Option : **1**

Section : **Computer Literacy**

**Q.1** Memory hierarchy refers to the ranking of computer memory devices based on their access time. Arrange the following computer memory devices in the order of fastest to slowest.

- RAM
- (CPU) Register
- Cache Memory
- Hard Drive

Choose the most appropriate answer from the options given below :

- (1) Hard Drives, RAM, Cache Memory, (CPU) Register
- (2) (CPU) Register, RAM, Cache Memory, Hard Drive
- (3) (CPU) Register, Cache Memory, RAM, Hard Drive
- (4) Cache Memory, (CPU) Register, Hard Drive, RAM

**Options**

1. 1
2. 2
3. 3
4. 4

Question Type : **MCQ**

Question ID : **8782703338**

Option 1 ID : **87827013165**

Option 2 ID : **87827013166**

Option 3 ID : **87827013167**

Option 4 ID : **87827013168**

Status : **Answered**

Chosen Option : **4**

**Q.2** Which one of the following statements is **FALSE** in the context of Operating Systems ?

- (1) Virtual memory provides a large virtual memory to programmers on a system having a smaller physical memory.
- (2) Virtual memory enables execution of a process on a system whose main memory size is less than the total memory required by the process.
- (3) Virtual memory enables a process execution to start even when sufficient free memory for loading the entire process is not available.
- (4) Virtual memory handles the scheduling of processes for their execution in an overlapping fashion.

**Options**

1. 1
2. 2
3. 3
4. 4

Question Type : **MCQ**

Question ID : **8782703344**

Option 1 ID : **87827013189**

Option 2 ID : **87827013190**

Option 3 ID : **87827013191**

Option 4 ID : **87827013192**

Status : **Answered**

Chosen Option : **4**



**Q.3** In Microsoft Windows, a bar that contains the name of the application you are working with and the name of the opened document is called a \_\_\_\_\_.

- (1) Status bar
- (2) Title bar
- (3) Notification bar
- (4) Task bar

**Options** 1. 1

- 2. 2
- 3. 3
- 4. 4

Question Type : **MCQ**

Question ID : **8782703341**

Option 1 ID : **87827013177**

Option 2 ID : **87827013178**

Option 3 ID : **87827013179**

Option 4 ID : **87827013180**

Status : **Answered**

Chosen Option : **2**

**Q.4** What is the main purpose of using "CAPTCHA" on websites ?

- (1) Detecting DDoS attacks
- (2) Preventing phishing attacks
- (3) Blocking malicious IP addresses
- (4) Distinguishing humans from bots

**Options** 1. 1

- 2. 2
- 3. 3
- 4. 4

Question Type : **MCQ**

Question ID : **8782703339**

Option 1 ID : **87827013169**

Option 2 ID : **87827013170**

Option 3 ID : **87827013171**

Option 4 ID : **87827013172**

Status : **Answered**

Chosen Option : **4**

**Q.5** Identify the statements which are **FALSE** in the context of computer network security.

- A. Cyber bullying is a form of harassment or bullying inflicted through the use of Internet.
- B. Cyber trolling is an internet slang for a person who intentionally starts arguments or upsets others by posting inflammatory remarks.
- C. Email spoofing means sending malicious and bad application and files through direct messaging, email or websites etc. in order to get access to user's personal data.
- D. Worm is a program that, when run, will attempt to install a regular virus onto user's hard disk.
- E. Virus dropper is a program that, when run, will attempt to install a regular virus onto user's hard disk.

Choose the most appropriate answer from the options given below :

- (1) A and D only
- (2) B and E only
- (3) C and D only
- (4) B and E only

**Options** 1. 1

2. 2

3. 3

4. 4

Question Type : **MCQ**

Question ID : **8782703337**

Option 1 ID : **87827013161**

Option 2 ID : **87827013162**

Option 3 ID : **87827013163**

Option 4 ID : **87827013164**

Status : **Answered**

Chosen Option : **3**



**Q.6** Identify the purpose of the network interface card (NIC) in a computer.

- A. To process and execute instructions.
- B. To connect computers to a network and facilitate communication.
- C. To display graphics and images on the screen.

Choose the most appropriate answer from the options given below :

- (1) A only
- (2) B only
- (3) A and B only
- (4) A and C only

**Options**

- 1. 1
- 2. 2
- 3. 3
- 4. 4

Question Type : **MCQ**

Question ID : **8782703346**

Option 1 ID : **87827013197**

Option 2 ID : **87827013198**

Option 3 ID : **87827013199**

Option 4 ID : **87827013200**

Status : **Answered**

Chosen Option : **2**



Q.7 Match List I with List II.

List I	List II
A. 1 MB	(I) $2^{40}$ Bytes
B. 1 GB	(II) $2^{10}$ Bytes
C. 1 TB	(III) $2^{30}$ Bytes
D. 1 KB	(IV) $2^{20}$ Bytes

Choose the correct answer from the options given below :

- (1) A-III, B-IV, C-I, D-II
- (2) A-IV, B-III, C-I, D-II
- (3) A-III, B-IV, C-II, D-I
- (4) A-IV, B-III, C-II, D-I

Options

- 1. 1
- 2. 2
- 3. 3
- 4. 4

Question Type : MCQ

Question ID : 8782703342

Option 1 ID : 87827013181

Option 2 ID : 87827013182

Option 3 ID : 87827013183

Option 4 ID : 87827013184

Status : Answered

Chosen Option : 2

Q.8 The correct way to represent hexadecimal numbers  $(AE)_{16}$ ,  $(75)_{16}$ ,  $(1F)_{16}$  and  $(F1)_{16}$  in an increasing order is :

- (1)  $75 < 1F < F1 < AE$
- (2)  $AE < F1 < 1F < 75$
- (3)  $F1 < AE < 75 < 1F$
- (4)  $1F < 75 < AE < F1$

Options

- 1. 1
- 2. 2
- 3. 3
- 4. 4

Question Type : MCQ

Question ID : 8782703343

Option 1 ID : 87827013185

Option 2 ID : 87827013186

Option 3 ID : 87827013187

Option 4 ID : 87827013188

Status : Answered

Chosen Option : 1



**Q.9** In MS Word 2019, which of the following options is **not** available in "font" dialogue box ?

- (1) Font
- (2) Indents and spacing
- (3) Font style
- (4) Font color

- Options**
- 1. 1
  - 2. 2
  - 3. 3
  - 4. 4

Question Type : **MCQ**  
Question ID : **8782703345**  
Option 1 ID : **87827013193**  
Option 2 ID : **87827013194**  
Option 3 ID : **87827013195**  
Option 4 ID : **87827013196**  
Status : **Answered**  
Chosen Option : **2**

**Q.10** Microsoft Word 2016 provides an option called "Views", which facilitates to display documents in different ways. In the context of "views", match List I with List II.

List I (Types of views)	List II (Description/Purpose)
A. Read mode	(i) Displays document in full-screen, making it easier to read.
B. Print layout	(ii) Shows what the document looks like when it is printed.
C. Web layout	(iii) Shows what the document would look like if it is saved as a webpage

Choose the correct answer from the options given below :

- (1) A-I, B-II, C-III
- (2) A-II, B-III, C-I
- (3) A-II, B-I, C-III
- (4) A-III, B-II, C-I

- Options**
- 1. 1
  - 2. 2
  - 3. 3
  - 4. 4

Question Type : **MCQ**  
Question ID : **8782703340**  
Option 1 ID : **87827013173**  
Option 2 ID : **87827013174**  
Option 3 ID : **87827013175**  
Option 4 ID : **87827013176**  
Status : **Answered**  
Chosen Option : **1**