



# Teachingninja.in



**Latest Govt Job updates**



**Private Job updates**



**Free Mock tests available**

**Visit - [teachingninja.in](https://teachingninja.in)**



Teachingninja.in

# **EPFO SSA Stage I**

**Previous Year Paper**  
**21 Aug, 2023 Shift 2**

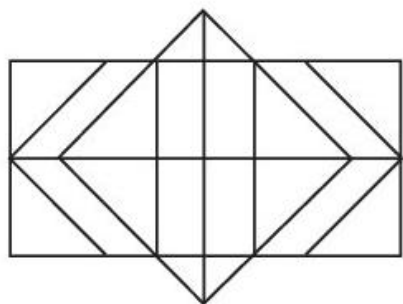


EPFO SSA EXAM - AUGUST 2023

Application No	
Candidate Name	
Roll No	
Test Date	21/08/2023
Test Time	2:00 PM - 4:30 PM
Subject	Social Security Assistant Stage I Examination

Section : General Aptitude

Q.1 Find the number of hexagons in the following figure :



- (1) 4
- (2) 5
- (3) 6
- (4) 7

Options 1. 1  
2. 2  
3. 3  
4. 4

Question Type : MCQ  
Question ID : 4795483509  
Option 1 ID : 47954813897  
Option 2 ID : 47954813898  
Option 3 ID : 47954813899  
Option 4 ID : 47954813900  
Status : Not Answered  
Chosen Option : --

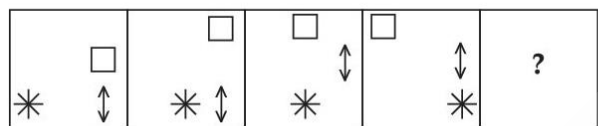
**Q.2** If in a code language 'C' =3, 'ME' =9 and 'PETS' =15, then how will 'HOTEL' be coded in this language ?

- (1) 21
- (2) 18
- (3) 16
- (4) 12

- Options**
- 1. 1
  - 2. 2
  - 3. 3
  - 4. 4

Question Type : **MCQ**  
Question ID : **4795483514**  
Option 1 ID : **47954813917**  
Option 2 ID : **47954813918**  
Option 3 ID : **47954813919**  
Option 4 ID : **47954813920**  
Status : **Answered**  
Chosen Option : 1

**Q.3** Choose the correct option to replace the question mark '?' in the following figural series :



- (1)
- (2)
- (3)
- (4)

- Options**
- 1. 1
  - 2. 2
  - 3. 3
  - 4. 4

Question Type : **MCQ**  
Question ID : **4795483506**  
Option 1 ID : **47954813885**  
Option 2 ID : **47954813886**  
Option 3 ID : **47954813887**  
Option 4 ID : **47954813888**  
Status : **Answered**  
Chosen Option : 1



**Q.4** Below a question is given and two statements numbered **(I)** and **(II)**. Decide whether the data provided in the statements is sufficient to answer the question.

The chairman of a big company visits any one department on Monday of every week except for the Monday of third week of every month, when did he visit the Purchase department ?

- (I) He visited Accounts department in the second week of September after having visited Purchase department on the earlier occasion.
- (II) He had visited Purchase department immediately after visiting stores department but before visiting Accounts department.

Choose the correct answer from the options given below :

- (1) Statement **(I)** alone is sufficient
- (2) Statement **(II)** alone is sufficient
- (3) Either Statement **(I)** or **(II)** is sufficient to answer the question
- (4) Both Statements **(I)** and **(II)** are necessary to answer the question

**Options** 1. 1

2. 2

3. 3

4. 4

Question Type : **MCQ**

Question ID : **4795483518**

Option 1 ID : **47954813933**

Option 2 ID : **47954813934**

Option 3 ID : **47954813935**

Option 4 ID : **47954813936**

Status : **Answered**

Chosen Option : **1**

**Q.5** 'A – B' means 'A is the mother of B' 'A × B' means 'A is the father of B' and 'A + B' means 'A is the daughter of B'. Now if  $\phi - \beta \times r + \$$  then which of the following is not true ?

- (1)  $\phi$  is the mother-in-law of  $\$$
- (2)  $r$  is  $\beta$ 's daughter
- (3)  $r$  is grand daughter of  $\phi$
- (4)  $\beta$  is the wife of  $\$$

**Options** 1. 1

2. 2

3. 3

4. 4

Question Type : **MCQ**

Question ID : **4795483513**

Option 1 ID : **47954813913**

Option 2 ID : **47954813914**

Option 3 ID : **47954813915**

Option 4 ID : **47954813916**

Status : **Answered**

Chosen Option : **4**

**Q.6** A, B, C, D, E and F are six doctors who specialize in 6 different areas viz, Nervous system, Brain, Skin, Heart, ENT and Bone diseases but not necessarily in the same order. They belong to 6 different cities - Patna, Nagpur, Modinagar, Bilaspur, Chandigarh and Bhopal not necessarily in the same order. C does not belong to Bilaspur. The doctor who specialized in ENT does not belong to Bhopal. D specialized in Brain diseases and does not belong to Patna. Skin specialist doctor belongs to Nagpur, B belongs to Bhopal. A belongs to Modinagar and he specialized neither in ENT nor heart-disease. F is not specialist of bone and does not belong to Patna. Bone diseases specialist belongs to Bilaspur. The Nervous system specialist belongs to which city ?

- (1) Bhopal
- (2) Modinagar
- (3) Chandigarh
- (4) Nagpur

**Options** 1. 1  
2. 2  
3. 3  
4. 4

Question Type : **MCQ**  
Question ID : **4795483497**  
Option 1 ID : **47954813849**  
Option 2 ID : **47954813850**  
Option 3 ID : **47954813851**  
Option 4 ID : **47954813852**  
Status : **Answered**  
Chosen Option : **2**

**Q.7** A, B, C, D, E, F and G are sitting around a circular table for dinner. The 5 of them are facing the centre and remaining 2 are facing opposite to the centre. One of them who is facing opposite to the centre is the immediate neighbour of B. A is 4<sup>th</sup> to the left of G, who is facing the centre. D is 3<sup>rd</sup> to the right of C and both of them are facing the centre. One who is facing opposite to the centre is sitting between F and D. Neither C nor D is the immediate neighbour of E.

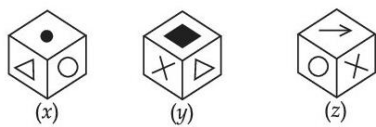
Who are facing opposite to the centre ?

- (1) B and E
- (2) A and F
- (3) A and E
- (4) B and F

**Options** 1. 1  
2. 2  
3. 3  
4. 4

Question Type : **MCQ**  
Question ID : **4795483498**  
Option 1 ID : **47954813853**  
Option 2 ID : **47954813854**  
Option 3 ID : **47954813855**  
Option 4 ID : **47954813856**  
Status : **Answered**  
Chosen Option : **3**

**Q.8** Three different positions of the cube are shown in figures *x*, *y* and *z*. Based in this information answer the question given below :



Which symbol is at the bottom of fig, (*y*) ?

- (1) Triangle
- (2) Dot
- (3) Circle
- (4) Arrow

**Options** 1. 1  
2. 2  
3. 3  
4. 4

Question Type : **MCQ**  
Question ID : **4795483521**  
Option 1 ID : **47954813945**  
Option 2 ID : **47954813946**  
Option 3 ID : **47954813947**  
Option 4 ID : **47954813948**  
Status : **Answered**  
Chosen Option : **3**

**Q.9** In a row of girls facing North, A is 10<sup>th</sup> to the left of B, Who is 21<sup>st</sup> from the right end. If C, who is 17<sup>th</sup> from the left end, is fourth to the right of A, how many girls are there in a row ?

- (1) 53
- (2) 48
- (3) 45
- (4) 43

**Options** 1. 1  
2. 2  
3. 3  
4. 4

Question Type : **MCQ**  
Question ID : **4795483500**  
Option 1 ID : **47954813861**  
Option 2 ID : **47954813862**  
Option 3 ID : **47954813863**  
Option 4 ID : **47954813864**  
Status : **Answered**  
Chosen Option : **2**

**Q.10** Find the missing term in the following series :

7934, 7141, 6427, 5785, \_\_\_\_?\_\_\_\_, 4687.

- (1) 5217
- (2) 5309
- (3) 5207
- (4) 5415

**Options** 1. 1

2. 2

3. 3

4. 4

Question Type : **MCQ**

Question ID : **4795483515**

Option 1 ID : **47954813921**

Option 2 ID : **47954813922**

Option 3 ID : **47954813923**

Option 4 ID : **47954813924**

Status : **Not Answered**

Chosen Option : --

**Q.11** The first two words are related in a certain way. Choose the correct option which is similarly related to the third word to replace the question mark ['?'].

Cache : Hide : : Conciliatory : \_\_\_\_?\_\_\_\_.

- (1) Friendiness
- (2) Garrulous
- (3) Notorious
- (4) Obvious

**Options** 1. 1

2. 2

3. 3

4. 4

Question Type : **MCQ**

Question ID : **4795483516**

Option 1 ID : **47954813925**

Option 2 ID : **47954813926**

Option 3 ID : **47954813927**

Option 4 ID : **47954813928**

Status : **Answered**

Chosen Option : 4

Q.12 Find the water image of the given combination.

U S 9 1 Q 4 M 5 W 3

(1) U 2 8 J O 4 W 2 M 3

(2) U 2 8 J O 4 W 2 M 8

(3) U 2 6 J O 4 W 2 M 3

(4) U S 8 J O 4 W 2 M 8

Options 1. 1

2. 2

3. 3

4. 4

Question Type : MCQ

Question ID : 4795483519

Option 1 ID : 47954813937

Option 2 ID : 47954813938

Option 3 ID : 47954813939

Option 4 ID : 47954813940

Status : Answered

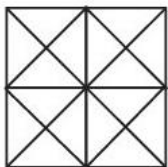
Chosen Option : 3



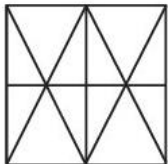
Q.13 Choose the correct option in which the given figure is embedded :



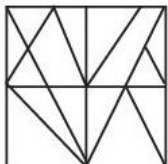
(1)



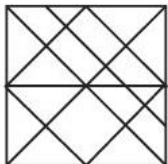
(2)



(3)



(4)



- Options
- 1. 1
  - 2. 2
  - 3. 3
  - 4. 4

Question Type : MCQ  
Question ID : 4795483503  
Option 1 ID : 47954813873  
Option 2 ID : 47954813874  
Option 3 ID : 47954813875  
Option 4 ID : 47954813876  
Status : Answered  
Chosen Option : 2

**Q.14** Jumbled letters of a meaningful word are given. Rearrange these letters and select from the given alternatives the word which is almost opposite in meaning to the re-arranged word.

T O L H S I E

- (1) Defend
- (2) Rejoice
- (3) Cordial
- (4) Gentle

- Options**
- 1. 1
  - 2. 2
  - 3. 3
  - 4. 4

Question Type : **MCQ**  
Question ID : **4795483511**  
Option 1 ID : **47954813905**  
Option 2 ID : **47954813906**  
Option 3 ID : **47954813907**  
Option 4 ID : **47954813908**  
Status : **Answered**  
Chosen Option : **4**

**Q.15** A watch goes fast by 12 minutes compared to the right time everyday. If it is corrected and set to the standard time at 12 O' clock at noon which of the following will be the time shown by it at 8 : 00 am in the morning ?

- (1) 8 : 15 am
- (2) 8 : 10 am
- (3) 8 : 12 am
- (4) 8 : 20 am

- Options**
- 1. 1
  - 2. 2
  - 3. 3
  - 4. 4

Question Type : **MCQ**  
Question ID : **4795483496**  
Option 1 ID : **47954813845**  
Option 2 ID : **47954813846**  
Option 3 ID : **47954813847**  
Option 4 ID : **47954813848**  
Status : **Answered**  
Chosen Option : **3**



**Q.16** Rupesh, Sameer and Atish are in control of the following number-letter-symbol series, respectively :

Rupesh : 3 & P \* 8 M A F £ 7 T Δ 5

Sameer : ⊗ 1 □ B © W 4 \$ @ C P G ↔

Atish : J 3 K # R S ⊙ 2 Y ≡ 6 E H

If from each series, amongst letters/ numbers/symbols the one which is in highest count is sorted out and then arranged in the descending order on the basis of the number of elements they have, then which of the following will indicate the correct descending order ?

- (1) Atish - letters, Sameer - numbers, Rupesh - letters
- (2) Rupesh - letters, Sameer - numbers, Atish - symbols
- (3) Atish - letters, Sameer - symbols, Rupesh - symbols
- (4) Sameer - symbols, Atish - numbers, Rupesh - symbols

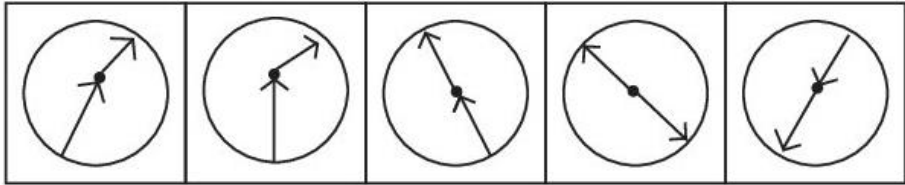
- Options**
- 1. 1
  - 2. 2
  - 3. 3
  - 4. 4

Question Type : MCQ  
Question ID : 4795483501  
Option 1 ID : 47954813865  
Option 2 ID : 47954813866  
Option 3 ID : 47954813867  
Option 4 ID : 47954813868  
Status : Answered  
Chosen Option : 2






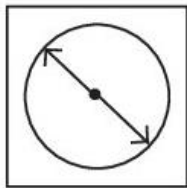
Q.17 Choose the odd figure from the following :




(1)



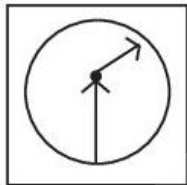
(2)



(3)



(4)



- Options
- 1. 1
  - 2. 2
  - 3. 3
  - 4. 4



Question Type : MCQ  
Question ID : 4795483504  
Option 1 ID : 47954813877  
Option 2 ID : 47954813878  
Option 3 ID : 47954813879  
Option 4 ID : 47954813880  
Status : Answered  
Chosen Option : 2

**Q.18** Given below are two statements numbered (I) and (II) followed by four conclusions numbered (I), (II), (III) and (IV).

- Statements :** (I) All politicians are honest  
(II) All honest are fair

- Conclusions :** (I) Some honest are politicians  
(II) No honest is politician  
(III) Some fair are politicians  
(IV) All fair are politicians

Read the conclusions and then decide which of the given conclusion(s) logically follow(s) from the given statements.

- (1) Only (IV) follows  
(2) Only (I) follows  
(3) Only (I) and (II) follow  
(4) Only (I) and (III) follow

- Options** 1. 1  
2. 2  
3. 3  
4. 4

Question Type : **MCQ**  
Question ID : **4795483520**  
Option 1 ID : **47954813941**  
Option 2 ID : **47954813942**  
Option 3 ID : **47954813943**  
Option 4 ID : **47954813944**  
Status : **Answered**  
Chosen Option : **4**

**Q.19** Given below are two statements numbered (I) and (II). Based on the statements answer the question that follow.

- (I) Advika was born on an even date of the month.  
(II) Advika's birth date was a prime number.

On which date was Advika born in February 2004 ?

- (1) 2<sup>nd</sup> February, 2006  
(2) 6<sup>th</sup> February, 2004  
(3) 4<sup>th</sup> February, 2004  
(4) 2<sup>nd</sup> February, 2004

- Options** 1. 1  
2. 2  
3. 3  
4. 4

Question Type : **MCQ**  
Question ID : **4795483522**  
Option 1 ID : **47954813949**  
Option 2 ID : **47954813950**  
Option 3 ID : **47954813951**  
Option 4 ID : **47954813952**  
Status : **Answered**  
Chosen Option : **4**

**Q.20** In the following question, jumbled letters of a meaningful word are given. Rearrange these letters and select from the given alternatives the word which is almost similar in meaning to the rearranged word.

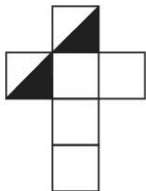
ITGNDLEI

- (1) Intelligent
- (2) Quick
- (3) Laborious
- (4) Difficult

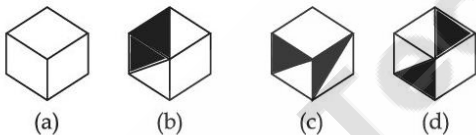
- Options**
- 1. 1
  - 2. 2
  - 3. 3
  - 4. 4

Question Type : **MCQ**  
Question ID : **4795483523**  
Option 1 ID : **47954813953**  
Option 2 ID : **47954813954**  
Option 3 ID : **47954813955**  
Option 4 ID : **47954813956**  
Status : **Answered**  
Chosen Option : 1

**Q.21** Choose which of (a), (b), (c), (d) boxes can be formed by using the paper sheet given below.



(Paper sheet)

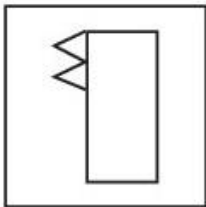


- (1) (a) and (c) only
- (2) (c) and (d) only
- (3) (a) and (d) only
- (4) (b) only

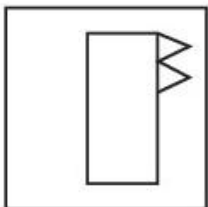
- Options**
- 1. 1
  - 2. 2
  - 3. 3
  - 4. 4

Question Type : **MCQ**  
Question ID : **4795483495**  
Option 1 ID : **47954813841**  
Option 2 ID : **47954813842**  
Option 3 ID : **47954813843**  
Option 4 ID : **47954813844**  
Status : **Answered**  
Chosen Option : 2

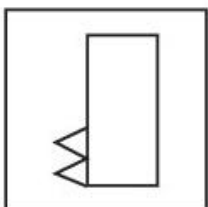
Q.22 Choose the correct water image of the given figure :



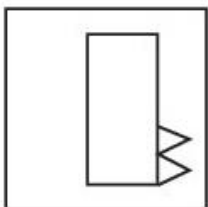
(1)



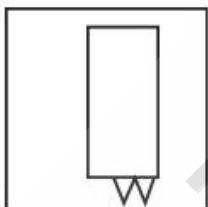
(2)



(3)



(4)



- Options
- 1. 1
  - 2. 2
  - 3. 3
  - 4. 4

Question Type : **MCQ**  
Question ID : **4795483510**  
Option 1 ID : **47954813901**  
Option 2 ID : **47954813902**  
Option 3 ID : **47954813903**  
Option 4 ID : **47954813904**  
Status : **Answered**  
Chosen Option : **3**

**Q.23** A statement is followed by two conclusions. Assume everything in the statement to be true, decide which of the conclusion(s) logically follow(s).

**Statement :** Untill our country achieves economic equality, political freedom and democracy would be meaningless.

- Conclusions :** (I) Political freedom and democracy go hand in hand.  
(II) Economic equality leads to real political freedom and democracy.

- (1) Only (I) follows
- (2) Only (II) follows
- (3) Neither (I) nor (II) follow
- (4) Both (I) and (II) follow

- Options** 1. 1  
2. 2  
3. 3  
4. 4

Question Type : **MCQ**  
Question ID : **4795483499**  
Option 1 ID : **47954813857**  
Option 2 ID : **47954813858**  
Option 3 ID : **47954813859**  
Option 4 ID : **47954813860**  
Status : **Answered**  
Chosen Option : **2**

**Q.24** Study the given information carefully and answer the question that follow :

Eleven students A, B, C, D, E, F, G, H, I, J and K are sitting in the first row of the class facing the teacher. D who is to the immediate left of F is second to the right of C. A is second to the right of E, who is at one of the ends. J is the immediate neighbour of A and B and third to the left of G. H is to the immediate left of D and third to the right of I.

Which of the following groups of friends is sitting to the right of G ?

- (1) IBJA
- (2) CHDF
- (3) CHDE
- (4) ICHDF

- Options** 1. 1  
2. 2  
3. 3  
4. 4

Question Type : **MCQ**  
Question ID : **4795483524**  
Option 1 ID : **47954813957**  
Option 2 ID : **47954813958**  
Option 3 ID : **47954813959**  
Option 4 ID : **47954813960**  
Status : **Answered**  
Chosen Option : **2**

**Q.25** Choose the correct option from the given alternatives which is similarly related as the given pair.

CLUSTER : VMDSSFU

- (1) WONDERS : NOWDSRE
- (2) REASONS : SFBSPOT
- (3) COUNSEL : VPDNMFT
- (4) PICKLES : BHOKRDK

- Options**
- 1. 1
  - 2. 2
  - 3. 3
  - 4. 4

Question Type : **MCQ**  
Question ID : **4795483517**  
Option 1 ID : **47954813929**  
Option 2 ID : **47954813930**  
Option 3 ID : **47954813931**  
Option 4 ID : **47954813932**  
Status : **Answered**  
Chosen Option : **3**

**Q.26** Find the term which does not fit into this series :

F 6 Y, H 13 W, K 28 T, O 59 Q, T 122 K

- (1) H 13 W
- (2) K 28 T
- (3) T 122 K
- (4) O 59 Q

- Options**
- 1. 1
  - 2. 2
  - 3. 3
  - 4. 4

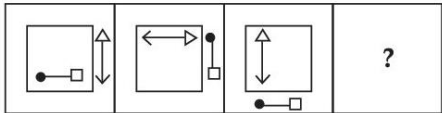
Question Type : **MCQ**  
Question ID : **4795483502**  
Option 1 ID : **47954813869**  
Option 2 ID : **47954813870**  
Option 3 ID : **47954813871**  
Option 4 ID : **47954813872**  
Status : **Answered**  
Chosen Option : **3**

- Q.27** You drove 15 km towards North and then 8 km towards East. You turned to the South and covered 8 km. Further you turned to West and covered 5 km, finally you turned left and drove 7 km. How far and in which directions are you from the starting point ?
- (1) 3 km, West
  - (2) 3 km, East
  - (3) 5 km, East
  - (4) 5 km, North

**Options** 1. 1  
2. 2  
3. 3  
4. 4

Question Type : **MCQ**  
Question ID : **4795483512**  
Option 1 ID : **47954813909**  
Option 2 ID : **47954813910**  
Option 3 ID : **47954813911**  
Option 4 ID : **47954813912**  
Status : **Answered**  
Chosen Option : **2**

- Q.28** The first two figures have certain relationship. Choose the correct option to replace the question mark['?'] having the same relationship with the third figure :



- (1)
- (2)
- (3)
- (4)

**Options** 1. 1  
2. 2  
3. 3  
4. 4

Question Type : **MCQ**  
Question ID : **4795483505**  
Option 1 ID : **47954813881**  
Option 2 ID : **47954813882**  
Option 3 ID : **47954813883**  
Option 4 ID : **47954813884**  
Status : **Answered**  
Chosen Option : **1**

**Q.29** From the left, if the third and ninth letters of the word CREDENTIAL are interchanged, and the fourth and seventh letter, the fifth and the eighth letters and first and last letters interchange their positions, which of the following will be ninth letter from the right end ?

- (1) T
- (2) I
- (3) A
- (4) R

**Options** 1. 1  
2. 2  
3. 3  
4. 4

Question Type : **MCQ**  
Question ID : **4795483508**  
Option 1 ID : **47954813893**  
Option 2 ID : **47954813894**  
Option 3 ID : **47954813895**  
Option 4 ID : **47954813896**  
Status : **Answered**  
Chosen Option : **4**

**Q.30** Two statements are given below. Decide whether the data provided in the statements is sufficient to answer the question.

On which day of the week did Anirudh visit the Zoo ?

**Statement (I) :** Anirudh did not visit zoo either on Tuesday or on Thursday.

**Statement (II) :** Anirudh visited zoo two days before his mother reached his house which was day after Monday.

- (1) The data in **Statement (I)** alone is sufficient to answer the question.
- (2) The data in **Statement (II)** alone is sufficient to answer the question.
- (3) The data given in both **Statements (I)** and **(II)** together is not sufficient to answer the question.
- (4) The data in both **Statements (I)** and **(II)** together is necessary to answer the question.

**Options** 1. 1  
2. 2  
3. 3  
4. 4

Question Type : **MCQ**  
Question ID : **4795483507**  
Option 1 ID : **47954813889**  
Option 2 ID : **47954813890**  
Option 3 ID : **47954813891**  
Option 4 ID : **47954813892**  
Status : **Answered**  
Chosen Option : **3**

Section : **General Knowledge/ General Awareness**



**Q.1** Which one of the following is considered as bioindicator of air pollution ?

- (1) Smog
- (2) Mycorrhiza
- (3) Acid rain
- (4) Lichen

**Options** 1. 1

2. 2

3. 3

4. 4

Question Type : **MCQ**

Question ID : **4795483546**

Option 1 ID : **47954814045**

Option 2 ID : **47954814046**

Option 3 ID : **47954814047**

Option 4 ID : **47954814048**

Status : **Answered**

Chosen Option : **3**

**Q.2** Why do historians divide history into different periods ?

- (A) To capture the characteristics of a time.
- (B) They show how we see the significance of the change from one period to the next.

Choose the **correct** answer from the options given below :

- (1) (A) only
- (2) (B) only
- (3) (A) and (B) both
- (4) Neither (A) nor (B)

**Options** 1. 1

2. 2

3. 3

4. 4

Question Type : **MCQ**

Question ID : **4795483534**

Option 1 ID : **47954813997**

Option 2 ID : **47954813998**

Option 3 ID : **47954813999**

Option 4 ID : **47954814000**

Status : **Answered**

Chosen Option : **2**



**Q.3** Consider the following statements about Indian Constitution. Choose those which are **not** correct ?

- (A) Under Universal Adult Franchise, voting right is extended to all above the age of 18 years.
- (B) Under the idea of secularism, there shall be no 'State Religion'.
- (C) Indian Constitution is a Federal Constitution.
- (D) There are 6 Rights of Citizens which no government can deny.

Choose the **correct** answer from the options given below :

- (1) (A), (B) and (C) only
- (2) (A) and (B) only
- (3) (A), (B) and (D) only
- (4) (A), (C) and (D) only

**Options** 1. 1

2. 2

3. 3

4. 4

Question Type : **MCQ**

Question ID : **4795483525**

Option 1 ID : **47954813961**

Option 2 ID : **47954813962**

Option 3 ID : **47954813963**

Option 4 ID : **47954813964**

Status : **Answered**

Chosen Option : **2**

**Q.4** Which pair of Sustainable Development Goals (SDGs) is **wrongly** matched ?

- (1) Goal 8 - Decent work and economic growth
- (2) Goal 14 - Life Below Water
- (3) Goal 5 - Gender Equality
- (4) Goal 9 - Good health and well-being

**Options** 1. 1

2. 2

3. 3

4. 4

Question Type : **MCQ**

Question ID : **4795483547**

Option 1 ID : **47954814049**

Option 2 ID : **47954814050**

Option 3 ID : **47954814051**

Option 4 ID : **47954814052**

Status : **Not Answered**

Chosen Option : **--**



**Q.5** Which of the following names of 'Slash and Burn' agriculture is **wrongly** matched with its place ?

- (1) Penda - Andhra Pradesh
- (2) Bringa - Rajasthan
- (3) Khil - Himalayan belt
- (4) Kuruvva - Jharkhand

**Options** 1. 1

2. 2

3. 3

4. 4

Question Type : **MCQ**

Question ID : **4795483530**

Option 1 ID : **47954813981**

Option 2 ID : **47954813982**

Option 3 ID : **47954813983**

Option 4 ID : **47954813984**

Status : **Not Answered**

Chosen Option : --

**Q.6** Who among the following introduced the "Objective Resolution" in the Constituent Assembly on 13 December 1946 ?

- (1) Dr. B.R. Ambedkar
- (2) Jawaharlal Nehru
- (3) C. Rajagopalachari
- (4) John Mathai

**Options** 1. 1

2. 2

3. 3

4. 4

Question Type : **MCQ**

Question ID : **4795483532**

Option 1 ID : **47954813989**

Option 2 ID : **47954813990**

Option 3 ID : **47954813991**

Option 4 ID : **47954813992**

Status : **Answered**

Chosen Option : 1

**Q.7** With reference to the parts of Indian Constitution, match the **List-I** consisting of different parts with **List-II**, the concerned areas.

List-I (Parts of Constitution)	List-II (Areas)
(A) Part XIV A	(I) Union Territories
(B) Part IX B	(II) Co-operative Societies
(C) Part XIII	(III) Trade and Commerce
(D) Part VIII	(IV) Tribunals

Choose the **correct** answer from the options given below :

- (1) (A)-(IV), (B)-(II), (C)-(I), (D)-(III)
- (2) (A)-(II), (B)-(I), (C)-(IV), (D)-(III)
- (3) (A)-(IV), (B)-(II), (C)-(III), (D)-(I)
- (4) (A)-(II), (B)-(I), (C)-(III), (D)-(IV)

- Options**
- 1. 1
  - 2. 2
  - 3. 3
  - 4. 4

Question Type : **MCQ**

Question ID : **4795483552**

Option 1 ID : **47954814069**

Option 2 ID : **47954814070**

Option 3 ID : **47954814071**

Option 4 ID : **47954814072**

Status : **Not Answered**

Chosen Option : --

**Q.8** What are the names of the three sessions of the Lok Sabha that are normally held each year ?

- (A) Summer
- (B) Winter
- (C) Budget
- (D) Monsoon

Choose the **correct** answer from the options given below :

- (1) (A), (C) and (D) only
- (2) (B) and (C) only
- (3) (B), (C) and (D) only
- (4) (C) and (D) only

- Options**
- 1. 1
  - 2. 2
  - 3. 3
  - 4. 4

Question Type : **MCQ**

Question ID : **4795483538**

Option 1 ID : **47954814013**

Option 2 ID : **47954814014**

Option 3 ID : **47954814015**

Option 4 ID : **47954814016**

Status : **Answered**

Chosen Option : 1

**Q.9** State day of Manipur is :

- (1) 21 January
- (2) 15 January
- (3) 21 February
- (4) 15 February

**Options** 1. 1  
2. 2  
3. 3  
4. 4

Question Type : **MCQ**  
Question ID : **4795483542**  
Option 1 ID : **47954814029**  
Option 2 ID : **47954814030**  
Option 3 ID : **47954814031**  
Option 4 ID : **47954814032**  
Status : **Answered**  
Chosen Option : **2**

**Q.10** The 2023 Asian Men's Champions Trophy for Hockey was played where ?

- (1) Rourkela
- (2) Bengaluru
- (3) Chennai
- (4) Bhopal

**Options** 1. 1  
2. 2  
3. 3  
4. 4

Question Type : **MCQ**  
Question ID : **4795483539**  
Option 1 ID : **47954814017**  
Option 2 ID : **47954814018**  
Option 3 ID : **47954814019**  
Option 4 ID : **47954814020**  
Status : **Answered**  
Chosen Option : **2**

**Q.11** Which one of the following economists stated that the number of people would increase faster than the food supply ?

- (1) David Ricardo
- (2) Adam Smith
- (3) John Maynard Keynes
- (4) Thomas Malthus

**Options** 1. 1

2. 2

3. 3

4. 4

Question Type : **MCQ**

Question ID : **4795483529**

Option 1 ID : **47954813977**

Option 2 ID : **47954813978**

Option 3 ID : **47954813979**

Option 4 ID : **47954813980**

Status : **Not Answered**

Chosen Option : --

**Q.12** When farmers specialise in vegetables only, the farming is known as :

- (1) Truck farming
- (2) Viticulture
- (3) Factory farming
- (4) Sericulture

**Options** 1. 1

2. 2

3. 3

4. 4

Question Type : **MCQ**

Question ID : **4795483531**

Option 1 ID : **47954813985**

Option 2 ID : **47954813986**

Option 3 ID : **47954813987**

Option 4 ID : **47954813988**

Status : **Answered**

Chosen Option : 1

**Q.13** Which of the following statements are correct ?

- (A) A section of big industrialists got together and drafted a joint proposal for setting up a planned economy in the country.
- (B) This plan came to be known as Bombay plan.
- (C) It was initiated in 1945.

Choose the **correct** answer from the options given below :

- (1) (A) and (B) only
- (2) (A) and (C) only
- (3) (A), (B) and (C)
- (4) (B) and (C) only

**Options** 1. 1

2. 2

3. 3

4. 4

Question Type : **MCQ**

Question ID : **4795483526**

Option 1 ID : **47954813965**

Option 2 ID : **47954813966**

Option 3 ID : **47954813967**

Option 4 ID : **47954813968**

Status : **Not Answered**

Chosen Option : --

**Q.14** Which among the following is **not** a part of the European Union ?

- (1) Austria
- (2) Norway
- (3) Estonia
- (4) Malta

**Options** 1. 1

2. 2

3. 3

4. 4

Question Type : **MCQ**

Question ID : **4795483527**

Option 1 ID : **47954813969**

Option 2 ID : **47954813970**

Option 3 ID : **47954813971**

Option 4 ID : **47954813972**

Status : **Answered**

Chosen Option : **2**



Q.15

1 Å (angstrom) is :

- (1)  $10^{-3}\text{m}$
- (2)  $10^{-6}\text{m}$
- (3)  $10^{-10}\text{m}$
- (4)  $10^{-12}\text{m}$

Options

- 1. 1
- 2. 2
- 3. 3
- 4. 4

Question Type : MCQ

Question ID : 4795483553

Option 1 ID : 47954814073

Option 2 ID : 47954814074

Option 3 ID : 47954814075

Option 4 ID : 47954814076

Status : Answered

Chosen Option : 2

Q.16 Famous cricketer Garfield Sobers played for which team in the test cricket ?

- (1) South Africa
- (2) England
- (3) Australia
- (4) West Indies

Options

- 1. 1
- 2. 2
- 3. 3
- 4. 4

Question Type : MCQ

Question ID : 4795483550

Option 1 ID : 47954814061

Option 2 ID : 47954814062

Option 3 ID : 47954814063

Option 4 ID : 47954814064

Status : Answered

Chosen Option : 2





**Q.17** According to the Constitution of India, the Parliament for the Union of India consists of which of the following ?

- (A) The council of States
- (B) The House of the People
- (C) The President of India
- (D) The Prime Minister of India

Choose the **correct** answer from the options given below :

- (1) (A) and (B) only
- (2) (A), (B) and (C) only
- (3) (A), (B) and (D) only
- (4) (A), (B), (C) and (D)

**Options** 1. 1

2. 2

3. 3

4. 4

Question Type : **MCQ**

Question ID : **4795483536**

Option 1 ID : **47954814005**

Option 2 ID : **47954814006**

Option 3 ID : **47954814007**

Option 4 ID : **47954814008**

Status : **Answered**

Chosen Option : **1**

**Q.18** Which one of the following States is **wrongly** matched with its State Bird ?

- (1) Gujarat - Asiatic lion
- (2) Haryana - Gaur
- (3) Sikkim - Red Panda
- (4) Madhya Pradesh - Barasingha

**Options** 1. 1

2. 2

3. 3

4. 4

Question Type : **MCQ**

Question ID : **4795483543**

Option 1 ID : **47954814033**

Option 2 ID : **47954814034**

Option 3 ID : **47954814035**

Option 4 ID : **47954814036**

Status : **Answered**

Chosen Option : **2**

**Q.19** Who among the following has been conferred with Padma Bhushan 2023 for Literature and Education ?

- (1) Ms. Sudha Murty
- (2) Shri Kapil Kapoor
- (3) Shri Deepak Dhar
- (4) Ms. Suman Kalyanpur

**Options** 1. 1  
2. 2  
3. 3  
4. 4

Question Type : **MCQ**  
Question ID : **4795483540**  
Option 1 ID : **47954814021**  
Option 2 ID : **47954814022**  
Option 3 ID : **47954814023**  
Option 4 ID : **47954814024**  
Status : **Answered**  
Chosen Option : **3**

**Q.20** In which year was the Livre - Unit of currency in France discontinued ?

- (1) 1774
- (2) 1794
- (3) 1789
- (4) 1750

**Options** 1. 1  
2. 2  
3. 3  
4. 4

Question Type : **MCQ**  
Question ID : **4795483533**  
Option 1 ID : **47954813993**  
Option 2 ID : **47954813994**  
Option 3 ID : **47954813995**  
Option 4 ID : **47954813996**  
Status : **Not Answered**  
Chosen Option : **--**



**Q.21** Total how many Padma Awards for 2023 have been approved for conferment by the President of India ?

- (1) 110
- (2) 95
- (3) 100
- (4) 106

**Options** 1. 1  
2. 2  
3. 3  
4. 4

Question Type : **MCQ**  
Question ID : **4795483554**  
Option 1 ID : **47954814077**  
Option 2 ID : **47954814078**  
Option 3 ID : **47954814079**  
Option 4 ID : **47954814080**  
Status : **Answered**  
Chosen Option : 1

**Q.22** Which of the following is **not** an infectious disease ?

- (1) Smallpox
- (2) Dengue
- (3) Typhoid
- (4) Cancer

**Options** 1. 1  
2. 2  
3. 3  
4. 4

Question Type : **MCQ**  
Question ID : **4795483544**  
Option 1 ID : **47954814037**  
Option 2 ID : **47954814038**  
Option 3 ID : **47954814039**  
Option 4 ID : **47954814040**  
Status : **Answered**  
Chosen Option : 4



**Q.23** According to Koeppen's scheme of classification of climate, which of the following symbols is **wrongly** matched with its group ?

- (1) A - Tropical
- (2) H - High Land
- (3) E - Dry Climates
- (4) C - Warm Temperate

**Options** 1. 1

2. 2

3. 3

4. 4

Question Type : **MCQ**

Question ID : **4795483528**

Option 1 ID : **47954813973**

Option 2 ID : **47954813974**

Option 3 ID : **47954813975**

Option 4 ID : **47954813976**

Status : **Not Answered**

Chosen Option : --

**Q.24** Which one among the following statements is **not** correct about the Pradhan Mantri Suraksha Bima Yojana (PMSBY) ?

- (1) It is a one-year life insurance scheme.
- (2) It is available to people in the age group of 18-70 years.
- (3) It is available to people having a bank account who give their consent to join and enable auto debit.
- (4) It provides risk cover of ₹ 2 Lakh for accidental death and permanent total disabilities and ₹ 1 lakh for partial disability.

**Options** 1. 1

2. 2

3. 3

4. 4

Question Type : **MCQ**

Question ID : **4795483545**

Option 1 ID : **47954814041**

Option 2 ID : **47954814042**

Option 3 ID : **47954814043**

Option 4 ID : **47954814044**

Status : **Answered**

Chosen Option : 1



**Q.25** Who among the following won the Wimbledon 2023 Men's Singles ?

- (1) Carlos Alcaraz
- (2) Novak Djokovic
- (3) Roger Federer
- (4) Rafael Nadal

**Options** 1. 1  
2. 2  
3. 3  
4. 4

Question Type : **MCQ**  
Question ID : **4795483535**  
Option 1 ID : **47954814001**  
Option 2 ID : **47954814002**  
Option 3 ID : **47954814003**  
Option 4 ID : **47954814004**  
Status : **Answered**  
Chosen Option : 1

**Q.26** When was the National Action Plan on Climate Change (NAPCC) established in India ?

- (1) 2009
- (2) 2008
- (3) 2007
- (4) 2010

**Options** 1. 1  
2. 2  
3. 3  
4. 4

Question Type : **MCQ**  
Question ID : **4795483548**  
Option 1 ID : **47954814053**  
Option 2 ID : **47954814054**  
Option 3 ID : **47954814055**  
Option 4 ID : **47954814056**  
Status : **Answered**  
Chosen Option : 2



**Q.27** On which date World Day of Social Justice is observed ?

- (1) 4<sup>th</sup> January
- (2) 20<sup>th</sup> February
- (3) 8<sup>th</sup> March
- (4) 24<sup>th</sup> February

**Options** 1. 1  
2. 2  
3. 3  
4. 4

Question Type : **MCQ**  
Question ID : **4795483551**  
Option 1 ID : **47954814065**  
Option 2 ID : **47954814066**  
Option 3 ID : **47954814067**  
Option 4 ID : **47954814068**  
Status : **Not Answered**  
Chosen Option : --

**Q.28** Root hairs of plants roots absorb water from soil by :

- (1) Osmosis
- (2) Diffusion
- (3) Exocytosis
- (4) Phagocytosis

**Options** 1. 1  
2. 2  
3. 3  
4. 4

Question Type : **MCQ**  
Question ID : **4795483549**  
Option 1 ID : **47954814057**  
Option 2 ID : **47954814058**  
Option 3 ID : **47954814059**  
Option 4 ID : **47954814060**  
Status : **Not Answered**  
Chosen Option : --



**Q.29** Which one among the following statements correctly defines Cash Reserve Ratio (CRR) ?

- (1) Percentage of deposit which a bank must keep as cash reserve with the bank.
- (2) Percentage of Funds held in reserve by a mortgage company to pay taxes or insurance.
- (3) Percentage of interest paid on a Savings Accounts.
- (4) Percentage of additional costs charged per year for a loan or credit

**Options** 1. 1  
2. 2  
3. 3  
4. 4

Question Type : **MCQ**  
Question ID : **4795483537**  
Option 1 ID : **47954814009**  
Option 2 ID : **47954814010**  
Option 3 ID : **47954814011**  
Option 4 ID : **47954814012**  
Status : **Answered**  
Chosen Option : **1**

**Q.30** When did Jharkhand become a State of the Republic of India ?

- (1) 15 November 2005
- (2) 15 November 2002
- (3) 15 November 2000
- (4) 15 November 2004

**Options** 1. 1  
2. 2  
3. 3  
4. 4

Question Type : **MCQ**  
Question ID : **4795483541**  
Option 1 ID : **47954814025**  
Option 2 ID : **47954814026**  
Option 3 ID : **47954814027**  
Option 4 ID : **47954814028**  
Status : **Answered**  
Chosen Option : **3**

Section : **Quantitative Ability**

**Q.1** David invested certain amount in three different schemes A, B and C with the rate of interest 10%, 12% and 15% per annum respectively. If he invested ₹ 8000 in scheme A and get a total interest of ₹ 3200 at the end of a year. If the amount invested in scheme C was 240% of the amount invested in scheme B. What was the total amount invested ?

- (1) ₹ 20000
- (2) ₹ 25000
- (3) ₹ 30000
- (4) ₹ 35000

**Options** 1. 1  
2. 2  
3. 3  
4. 4

Question Type : **MCQ**  
Question ID : **4795483580**  
Option 1 ID : **47954814181**  
Option 2 ID : **47954814182**  
Option 3 ID : **47954814183**  
Option 4 ID : **47954814184**  
Status : **Answered**  
Chosen Option : **3**

**Q.2** Two men or 3 women can do a work in 42 days. How many days will 4 men and 12 women take to do the same work ?

- (1) 9
- (2) 6
- (3) 7
- (4) 8

**Options** 1. 1  
2. 2  
3. 3  
4. 4

Question Type : **MCQ**  
Question ID : **4795483562**  
Option 1 ID : **47954814109**  
Option 2 ID : **47954814110**  
Option 3 ID : **47954814111**  
Option 4 ID : **47954814112**  
Status : **Answered**  
Chosen Option : **3**



**Q.3** The radius of a metallic solid sphere is 6 cm. After melting the sphere it is given the shape of a wire of radius 1 mm. The length of the wire (in m), is :

- (1) 2000
- (2) 288
- (3) 2680
- (4) 2880

**Options** 1. 1

- 2. 2
- 3. 3
- 4. 4

Question Type : **MCQ**

Question ID : **4795483564**

Option 1 ID : **47954814117**

Option 2 ID : **47954814118**

Option 3 ID : **47954814119**

Option 4 ID : **47954814120**

Status : **Not Answered**

Chosen Option : --

**Q.4** Two numbers are 26% and 5% more than a third number. How much percent is the first number more than the second ?

- (1) 40%
- (2) 20%
- (3) 25%
- (4) 21%

**Options** 1. 1

- 2. 2
- 3. 3
- 4. 4

Question Type : **MCQ**

Question ID : **4795483569**

Option 1 ID : **47954814137**

Option 2 ID : **47954814138**

Option 3 ID : **47954814139**

Option 4 ID : **47954814140**

Status : **Answered**

Chosen Option : **4**

**Q.5** The length, breadth and height of a cuboid are in the ratio 2 : 3 : 5. If its volume is  $6480 \text{ cm}^3$ . Then its dimensions (in cm) are :

- (1) 12, 18, 30
- (2) 4, 6, 10
- (3) 10, 15, 25
- (4) 14, 21, 35

**Options** 1. 1

- 2. 2
- 3. 3
- 4. 4

Question Type : **MCQ**

Question ID : **4795483583**

Option 1 ID : **47954814193**

Option 2 ID : **47954814194**

Option 3 ID : **47954814195**

Option 4 ID : **47954814196**

Status : **Answered**

Chosen Option : **1**

**Q.6** A group of boys went for trekking. They had a definite pattern for the schedule of trekking. If they went for trekking in the morning, they were free in the afternoon and vice-versa. They trekked for 16 days all together and had 10 free mornings and 12 free afternoons. What was the duration (in days) for their trekking ?

- (1) 27
- (2) 19
- (3) 38
- (4) 18

**Options** 1. 1

- 2. 2
- 3. 3
- 4. 4

Question Type : **MCQ**

Question ID : **4795483565**

Option 1 ID : **47954814121**

Option 2 ID : **47954814122**

Option 3 ID : **47954814123**

Option 4 ID : **47954814124**

Status : **Not Answered**

Chosen Option : **--**



**Q.7** Two labourers A and B are paid a total of ₹ 810 per day by their employer. If A is paid 25% more than the amount paid to B, how much is B paid per day ?

- (1) ₹ 280
- (2) ₹ 360
- (3) ₹ 405
- (4) ₹ 300

**Options** 1. 1

- 2. 2
- 3. 3
- 4. 4

Question Type : **MCQ**

Question ID : **4795483566**

Option 1 ID : **47954814125**

Option 2 ID : **47954814126**

Option 3 ID : **47954814127**

Option 4 ID : **47954814128**

Status : **Answered**

Chosen Option : **2**

**Q.8** The smallest number that must be added to 1792 to make it a perfect square is :

- (1) 75
- (2) 57
- (3) 28
- (4) 43

**Options** 1. 1

- 2. 2
- 3. 3
- 4. 4

Question Type : **MCQ**

Question ID : **4795483571**

Option 1 ID : **47954814145**

Option 2 ID : **47954814146**

Option 3 ID : **47954814147**

Option 4 ID : **47954814148**

Status : **Answered**

Chosen Option : **2**

**Q.9** Mohita started a business with ₹ 15,000. After 3 months Shivani joined her with a capital of ₹ 75,000. After another 3 months Aparna joined them with a capital of ₹ 50,000. At the end of the year they made a profit of ₹ 77,000. Then share of Mohita in profit will be :

- (1) ₹ 18,000
- (2) ₹ 12,000
- (3) ₹ 45,000
- (4) ₹ 42,000

**Options** 1. 1  
2. 2  
3. 3  
4. 4

Question Type : **MCQ**  
Question ID : **4795483574**  
Option 1 ID : **47954814157**  
Option 2 ID : **47954814158**  
Option 3 ID : **47954814159**  
Option 4 ID : **47954814160**  
Status : **Answered**  
Chosen Option : **2**

**Q.10** If  $\frac{a}{5} = \frac{b}{7} = \frac{c}{8}$ , then the value of  $(a + b + c) \div a$  is \_\_\_\_\_.

- (1)  $\frac{4}{3}$
- (2) 20
- (3) 4
- (4) 10

**Options** 1. 1  
2. 2  
3. 3  
4. 4

Question Type : **MCQ**  
Question ID : **4795483570**  
Option 1 ID : **47954814141**  
Option 2 ID : **47954814142**  
Option 3 ID : **47954814143**  
Option 4 ID : **47954814144**  
Status : **Not Answered**  
Chosen Option : **--**

**Q.11** A vendor bought bananas at 6 for ₹ 10 and sold them at 4 for ₹ 6. The gain or loss percent on the transaction is :

- (1) 10% gain
- (2) 20% loss
- (3) 10% loss
- (4) 15% gain

**Options** 1. 1

2. 2

3. 3

4. 4

Question Type : **MCQ**

Question ID : **4795483573**

Option 1 ID : **47954814153**

Option 2 ID : **47954814154**

Option 3 ID : **47954814155**

Option 4 ID : **47954814156**

Status : **Answered**

Chosen Option : **4**

**Q.12** The time taken by a 720 m long train travelling at 90 km/h in passing a person riding at the speed of 18 km/h in the direction towards the train will be :

- (1) 20 sec.
- (2) 24 sec.
- (3) 30 sec.
- (4) 32 sec.

**Options** 1. 1

2. 2

3. 3

4. 4

Question Type : **MCQ**

Question ID : **4795483559**

Option 1 ID : **47954814097**

Option 2 ID : **47954814098**

Option 3 ID : **47954814099**

Option 4 ID : **47954814100**

Status : **Answered**

Chosen Option : **2**

Q.13

If  $7^{3x-1} + 7 = 56$ , then value of  $x$  is :

- (1) 1
- (2) 0
- (3) 2
- (4) 3

Options

- 1. 1
- 2. 2
- 3. 3
- 4. 4

Question Type : MCQ

Question ID : 4795483582

Option 1 ID : 47954814189

Option 2 ID : 47954814190

Option 3 ID : 47954814191

Option 4 ID : 47954814192

Status : Answered

Chosen Option : 1

Q.14

The difference between the greatest and the smallest of the fractions  $\frac{3}{8}, \frac{5}{21}, \frac{5}{18}, \frac{3}{7}$  is :

- (1)  $\frac{2}{9}$
- (2)  $\frac{3}{10}$
- (3)  $\frac{5}{26}$
- (4)  $\frac{4}{21}$

Options

- 1. 1
- 2. 2
- 3. 3
- 4. 4

Question Type : MCQ

Question ID : 4795483558

Option 1 ID : 47954814093

Option 2 ID : 47954814094

Option 3 ID : 47954814095

Option 4 ID : 47954814096

Status : Answered

Chosen Option : 3



**Q.15** A and B together can complete a work in 20 days, B and C together can complete the same work in 24 days and A and C together can complete it in 30 days. In how many days, A, B and C working together can complete the work ?

- (1) 14
- (2) 15
- (3) 16
- (4) 18

**Options** 1. 1  
2. 2  
3. 3  
4. 4

Question Type : MCQ  
Question ID : 4795483563  
Option 1 ID : 47954814113  
Option 2 ID : 47954814114  
Option 3 ID : 47954814115  
Option 4 ID : 47954814116  
Status : Answered  
Chosen Option : 3

**Q.16** In an office 30% of the staff are female, 60% of the female staff and 50% of the male staff are married. The percentage of the unmarried staff in the office is :

- (1) 55
- (2) 53
- (3) 47
- (4) 64

**Options** 1. 1  
2. 2  
3. 3  
4. 4

Question Type : MCQ  
Question ID : 4795483572  
Option 1 ID : 47954814149  
Option 2 ID : 47954814150  
Option 3 ID : 47954814151  
Option 4 ID : 47954814152  
Status : Answered  
Chosen Option : 3

**Q.17** The ratio of the volume of a cone, sphere and a cylinder, if each has the same diameter and the same height is :

- (1) 1 : 1 : 1
- (2) 1 : 2 : 3
- (3) 1 : 3 : 2
- (4) 3 : 1 : 2

**Options** 1. 1

2. 2

3. 3

4. 4

Question Type : **MCQ**

Question ID : **4795483578**

Option 1 ID : **47954814173**

Option 2 ID : **47954814174**

Option 3 ID : **47954814175**

Option 4 ID : **47954814176**

Status : **Not Answered**

Chosen Option : --

**Q.18**

If the compound interest on a certain sum at  $8\frac{1}{3}\%$  for 2 years is ₹ 2175, then what is the simple interest on the same sum at the same rate and for the same period ?

- (1) ₹ 2064
- (2) ₹ 2088
- (3) ₹ 2094
- (4) ₹ 2108

**Options** 1. 1

2. 2

3. 3

4. 4

Question Type : **MCQ**

Question ID : **4795483556**

Option 1 ID : **47954814085**

Option 2 ID : **47954814086**

Option 3 ID : **47954814087**

Option 4 ID : **47954814088**

Status : **Answered**

Chosen Option : **3**





**Q.19** A, B and C independently can do a piece of work in 20, 30 and 60 days respectively. They work alternatively, one by one, and A started the work. After finishing the work they got ₹ 210. If the wages are divided in proportion to the work done by them, then the amount received by A, is :

- (1) ₹ 105
- (2) ₹ 70
- (3) ₹ 35
- (4) ₹ 102

**Options** 1. 1  
2. 2  
3. 3  
4. 4

Question Type : **MCQ**  
Question ID : **4795483581**  
Option 1 ID : **47954814185**  
Option 2 ID : **47954814186**  
Option 3 ID : **47954814187**  
Option 4 ID : **47954814188**  
Status : **Answered**  
Chosen Option : 1

**Q.20** A train crosses a 100 m long platform in 60 seconds at a speed of 60 km/h. The time taken (in sec.) by the train to cross a pole is :

- (1) 52
- (2) 54
- (3) 56
- (4) 60

**Options** 1. 1  
2. 2  
3. 3  
4. 4

Question Type : **MCQ**  
Question ID : **4795483560**  
Option 1 ID : **47954814101**  
Option 2 ID : **47954814102**  
Option 3 ID : **47954814103**  
Option 4 ID : **47954814104**  
Status : **Answered**  
Chosen Option : 4

**Q.21**

The area (in  $\text{cm}^2$ ) of a circle whose circumference is 176 cm  $\left(\text{use } \pi = \frac{22}{7}\right)$ , is :

- (1) 2424
- (2) 2440
- (3) 2448
- (4) 2464

**Options** 1. 1

- 2. 2
- 3. 3
- 4. 4

Question Type : **MCQ**

Question ID : **4795483576**

Option 1 ID : **47954814165**

Option 2 ID : **47954814166**

Option 3 ID : **47954814167**

Option 4 ID : **47954814168**

Status : **Answered**

Chosen Option : **4**

**Q.22**

Sumer borrowed some money on simple interest with the condition that interest will be charged at the rate of 9% for the first two years, at the rate of 10% for the next three years and at the rate of 12% for the period beyond 5 years. If he pays a total of ₹ 11,520 as interest at the end of 9 years, then how much did he borrow ?

- (1) ₹ 10,000
- (2) ₹ 11,500
- (3) ₹ 12,000
- (4) ₹ 12,800

**Options** 1. 1

- 2. 2
- 3. 3
- 4. 4

Question Type : **MCQ**

Question ID : **4795483555**

Option 1 ID : **47954814081**

Option 2 ID : **47954814082**

Option 3 ID : **47954814083**

Option 4 ID : **47954814084**

Status : **Answered**

Chosen Option : **4**

**Q.23** The volume of a right circular cylinder, with height 14 cm is equal to the volume of sphere with length of greatest circle as 44 cm. The area of the base of cylinder is :

- (1)  $\frac{98}{3} \pi$
- (2)  $\sqrt{\frac{58}{3}}$
- (3)  $58\pi$
- (4)  $\frac{58}{3} \pi^2$

**Options** 1. 1  
2. 2  
3. 3  
4. 4

Question Type : **MCQ**

Question ID : **4795483577**

Option 1 ID : **47954814169**

Option 2 ID : **47954814170**

Option 3 ID : **47954814171**

Option 4 ID : **47954814172**

Status : **Not Answered**

Chosen Option : --

**Q.24** The average of the first three numbers is three times of the fourth number. If the average of all the four numbers is 15, then fourth number will be :

- (1) 5
- (2) 6
- (3) 12
- (4) 15

**Options** 1. 1  
2. 2  
3. 3  
4. 4

Question Type : **MCQ**

Question ID : **4795483568**

Option 1 ID : **47954814133**

Option 2 ID : **47954814134**

Option 3 ID : **47954814135**

Option 4 ID : **47954814136**

Status : **Answered**

Chosen Option : 4



Q.25

If  $f = 34.2 - \left[ 5 + \frac{1}{5 + \frac{3}{5}} \right] + \left[ 3 + \frac{1}{3 + \frac{2}{3}} \right]$ , then  $f - \frac{29}{308}$  is equal to :

- (1) 32.4
- (2) 31.7
- (3) 32.2
- (4) 29.3

Options 1. 1

2. 2

3. 3

4. 4

Question Type : MCQ

Question ID : 4795483584

Option 1 ID : 47954814197

Option 2 ID : 47954814198

Option 3 ID : 47954814199

Option 4 ID : 47954814200

Status : Not Answered

Chosen Option : --

Q.26 What quantity (in kg) of tea worth ₹ 120/kg be mixed with 60 kg tea worth ₹ 80/kg to get tea worth ₹ 90/kg ?

- (1) 20
- (2) 16
- (3) 12
- (4) 15

Options 1. 1

2. 2

3. 3

4. 4

Question Type : MCQ

Question ID : 4795483561

Option 1 ID : 47954814105

Option 2 ID : 47954814106

Option 3 ID : 47954814107

Option 4 ID : 47954814108

Status : Answered

Chosen Option : 1



**Q.27** If  $A(x)$  is area of rectangle with dimensions  $3x - 5$  and  $x + 7$ , then value of  $A(3)$  is :

- (1) 26
- (2) 40
- (3) 28
- (4) 62

**Options** 1. 1

2. 2

3. 3

4. 4

Question Type : **MCQ**

Question ID : **4795483575**

Option 1 ID : **47954814161**

Option 2 ID : **47954814162**

Option 3 ID : **47954814163**

Option 4 ID : **47954814164**

Status : **Answered**

Chosen Option : **2**

**Q.28** The difference between simple interest and compound interest on ₹ 1200 for one year at 10% per annum compounded half yearly is :

- (1) ₹ 3
- (2) ₹ 4
- (3) ₹ 5
- (4) ₹ 6

**Options** 1. 1

2. 2

3. 3

4. 4

Question Type : **MCQ**

Question ID : **4795483579**

Option 1 ID : **47954814177**

Option 2 ID : **47954814178**

Option 3 ID : **47954814179**

Option 4 ID : **47954814180**

Status : **Answered**

Chosen Option : **1**



Q.29

$$6\frac{1}{2} - \left[ 3\frac{1}{4} + \left\{ 1\frac{1}{4} - \frac{1}{2} \times \left( 1\frac{1}{2} - \frac{1}{3} - \frac{1}{6} \right) \right\} \right] =$$

(1)  $5\frac{1}{2}$

(2)  $8\frac{2}{3}$

(3)  $2\frac{1}{2}$

(4)  $10\frac{3}{4}$

Options

1. 1
2. 2
3. 3
4. 4

Question Type : MCQ

Question ID : 4795483557

Option 1 ID : 47954814089

Option 2 ID : 47954814090

Option 3 ID : 47954814091

Option 4 ID : 47954814092

Status : Answered

Chosen Option : 3

Q.30 Twelve years ago the average age of Ritu and Sonu was 25 years. Average age of Ritu, Sonu and Maria is 32 years now. After 12 years the age of Maria will be :

- (1) 34 years
- (2) 36 years
- (3) 42 years
- (4) 32 years

Options

1. 1
2. 2
3. 3
4. 4

Question Type : MCQ

Question ID : 4795483567

Option 1 ID : 47954814129

Option 2 ID : 47954814130

Option 3 ID : 47954814131

Option 4 ID : 47954814132

Status : Answered

Chosen Option : 3

Section : General English with Comprehension

Comprehension:

Read the given passage carefully and answer the question that follow :

At a time when younger people are privileging smartphones, televisions and video games over other sources of entertainment, a nearly 55-year-old museum housing thousands of dolls from across the globe is still maintaining its old world charm and attracting not only children and teenagers, but also the visitors of all age groups. This is not really surprising, as it actually transports you into a world where you can forget the woes of the present.

With over 7,500 dolls on display, Shankar’s International Dolls Museum in the capital not only entertains children but also teaches them about art, culture and the costumes of different communities. The idea of dolls collection was born when eminent political cartoonist and journalist K. Shankar Pillai, better known simply as Shankar, received one as a gift from the Hungarian Ambassador in the early 1950s. Shankar fell so much in love with the doll that he began to collect costume dolls whenever he visited any country.

Soon, he was able to collect a fair number of dolls as his visits to foreign nations were frequent. He began to exhibit the dolls across the country after he was able to collect a sufficient number, but the frequent packing and unpacking was damaging the dolls.

The idea then emerged of a permanent space for the dolls and that is how the museum was setup. The museum is located in Nehru House on Bahadur Shah Zafar Marg in the building that houses the Children’s Book Trust, which was also set up by Shankar.

The museum began in 1965 with 1,000 dolls. Now there are more than 7,500 from over 85 countries. The museum has the largest collection of costume dolls in the world. Divided into two equal halves, one section of the museum is dedicated to Western countries like the UK and the US, Australia and New Zealand, as also the Commonwealth of Independent States, and the other half to Asian, African and Middle-East countries, including India. Several countries have gifted dolls to the museum to represent their country’s culture.

Apart from those dolls received in exchange, there are numerous dolls made at the workshop attached to the museum, including authentic Indian dolls in traditional attire. The dolls are sent as ‘return gifts’ for the dolls gifted by various countries.

SubQuestion No : 1

Q.1

Why do you think the dolls made in-house were sent as ‘return gifts’ :

(1) because there was no space in the museum to accommodate more dolls

(2) as a token of thanks

(3) because the Hungarian ambassador presented a gift

(4) so that business with that country can be advanced

Options

1. 1

2. 2

3. 3

4. 4

Question Type : MCQ

Question ID : 4795483590

Option 1 ID : 47954814217

Option 2 ID : 47954814218

Option 3 ID : 47954814219

Option 4 ID : 47954814220

Status : Answered

Chosen Option : 2



**Comprehension:**

Read the given passage carefully and answer the question that follow :

At a time when younger people are privileging smartphones, televisions and video games over other sources of entertainment, a nearly 55-year-old museum housing thousands of dolls from across the globe is still maintaining its old world charm and attracting not only children and teenagers, but also the visitors of all age groups. This is not really surprising, as it actually transports you into a world where you can forget the woes of the present.

With over 7,500 dolls on display, Shankar’s International Dolls Museum in the capital not only entertains children but also teaches them about art, culture and the costumes of different communities. The idea of dolls collection was born when eminent political cartoonist and journalist K. Shankar Pillai, better known simply as Shankar, received one as a gift from the Hungarian Ambassador in the early 1950s. Shankar fell so much in love with the doll that he began to collect costume dolls whenever he visited any country.

Soon, he was able to collect a fair number of dolls as his visits to foreign nations were frequent. He began to exhibit the dolls across the country after he was able to collect a sufficient number, but the frequent packing and unpacking was damaging the dolls.

The idea then emerged of a permanent space for the dolls and that is how the museum was setup. The museum is located in Nehru House on Bahadur Shah Zafar Marg in the building that houses the Children’s Book Trust, which was also set up by Shankar.

The museum began in 1965 with 1,000 dolls. Now there are more than 7,500 from over 85 countries. The museum has the largest collection of costume dolls in the world. Divided into two equal halves, one section of the museum is dedicated to Western countries like the UK and the US, Australia and New Zealand, as also the Commonwealth of Independent States, and the other half to Asian, African and Middle-East countries, including India. Several countries have gifted dolls to the museum to represent their country’s culture.

Apart from those dolls received in exchange, there are numerous dolls made at the workshop attached to the museum, including authentic Indian dolls in traditional attire. The dolls are sent as ‘return gifts’ for the dolls gifted by various countries.

**SubQuestion No : 2**

**Q.2** Which of the following statements is incorrect ?

- (1) The Dolls museum began in the 1950s.
- (2) There were 1,000 dolls in the museum initially.
- (3) Dolls gifted by several countries are housed in the museum.
- (4) The Dolls museum is housed in a building which also has the Children’s Book Trust.

- Options**
- 1. 1
  - 2. 2
  - 3. 3
  - 4. 4

Question Type : **MCQ**  
Question ID : **4795483593**  
Option 1 ID : **47954814229**  
Option 2 ID : **47954814230**  
Option 3 ID : **47954814231**  
Option 4 ID : **47954814232**  
Status : **Answered**  
Chosen Option : **1**



### Comprehension:

Read the given passage carefully and answer the question that follow :

At a time when younger people are privileging smartphones, televisions and video games over other sources of entertainment, a nearly 55-year-old museum housing thousands of dolls from across the globe is still maintaining its old world charm and attracting not only children and teenagers, but also the visitors of all age groups. This is not really surprising, as it actually transports you into a world where you can forget the woes of the present.

With over 7,500 dolls on display, Shankar's International Dolls Museum in the capital not only entertains children but also teaches them about art, culture and the costumes of different communities. The idea of dolls collection was born when eminent political cartoonist and journalist K. Shankar Pillai, better known simply as Shankar, received one as a gift from the Hungarian Ambassador in the early 1950s. Shankar fell so much in love with the doll that he began to collect costume dolls whenever he visited any country.

Soon, he was able to collect a fair number of dolls as his visits to foreign nations were frequent. He began to exhibit the dolls across the country after he was able to collect a sufficient number, but the frequent packing and unpacking was damaging the dolls.

The idea then emerged of a permanent space for the dolls and that is how the museum was setup. The museum is located in Nehru House on Bahadur Shah Zafar Marg in the building that houses the Children's Book Trust, which was also set up by Shankar.

The museum began in 1965 with 1,000 dolls. Now there are more than 7,500 from over 85 countries. The museum has the largest collection of costume dolls in the world. Divided into two equal halves, one section of the museum is dedicated to Western countries like the UK and the US, Australia and New Zealand, as also the Commonwealth of Independent States, and the other half to Asian, African and Middle-East countries, including India. Several countries have gifted dolls to the museum to represent their country's culture.

Apart from those dolls received in exchange, there are numerous dolls made at the workshop attached to the museum, including authentic Indian dolls in traditional attire. The dolls are sent as 'return gifts' for the dolls gifted by various countries.

#### SubQuestion No : 3

**Q.3** Which of the following statements is correct ?

- (1) Dolls made in the attached workshop are exclusively intended for display in the museum.
- (2) The 55-year-old museum houses thousands of dolls from across the globe.
- (3) The dolls come from Western countries so that they may be displayed.
- (4) Shankar visited foreign countries with the intension to collect dolls.

**Options** 1. 1  
2. 2  
3. 3  
4. 4

Question Type : **MCQ**

Question ID : **4795483591**

Option 1 ID : **47954814221**

Option 2 ID : **47954814222**

Option 3 ID : **47954814223**

Option 4 ID : **47954814224**

Status : **Answered**

Chosen Option : **2**

### Comprehension:

Read the given passage carefully and answer the question that follow :

At a time when younger people are privileging smartphones, televisions and video games over other sources of entertainment, a nearly 55-year-old museum housing thousands of dolls from across the globe is still maintaining its old world charm and attracting not only children and teenagers, but also the visitors of all age groups. This is not really surprising, as it actually transports you into a world where you can forget the woes of the present.

With over 7,500 dolls on display, Shankar's International Dolls Museum in the capital not only entertains children but also teaches them about art, culture and the costumes of different communities. The idea of dolls collection was born when eminent political cartoonist and journalist K. Shankar Pillai, better known simply as Shankar, received one as a gift from the Hungarian Ambassador in the early 1950s. Shankar fell so much in love with the doll that he began to collect costume dolls whenever he visited any country.

Soon, he was able to collect a fair number of dolls as his visits to foreign nations were frequent. He began to exhibit the dolls across the country after he was able to collect a sufficient number, but the frequent packing and unpacking was damaging the dolls.

The idea then emerged of a permanent space for the dolls and that is how the museum was setup. The museum is located in Nehru House on Bahadur Shah Zafar Marg in the building that houses the Children's Book Trust, which was also set up by Shankar.

The museum began in 1965 with 1,000 dolls. Now there are more than 7,500 from over 85 countries. The museum has the largest collection of costume dolls in the world. Divided into two equal halves, one section of the museum is dedicated to Western countries like the UK and the US, Australia and New Zealand, as also the Commonwealth of Independent States, and the other half to Asian, African and Middle-East countries, including India. Several countries have gifted dolls to the museum to represent their country's culture.

Apart from those dolls received in exchange, there are numerous dolls made at the workshop attached to the museum, including authentic Indian dolls in traditional attire. The dolls are sent as 'return gifts' for the dolls gifted by various countries.

#### SubQuestion No : 4

**Q.4** Which of the following is not listed as a source of entertainment in the given passage ?

- (1) Doll Museum
- (2) Smart phones
- (3) Video games
- (4) Cartoon books

**Options** 1. 1

2. 2

3. 3

4. 4

Question Type : **MCQ**

Question ID : **4795483587**

Option 1 ID : **47954814205**

Option 2 ID : **47954814206**

Option 3 ID : **47954814207**

Option 4 ID : **47954814208**

Status : **Answered**

Chosen Option : **4**

### Comprehension:

Read the given passage carefully and answer the question that follow :

At a time when younger people are privileging smartphones, televisions and video games over other sources of entertainment, a nearly 55-year-old museum housing thousands of dolls from across the globe is still maintaining its old world charm and attracting not only children and teenagers, but also the visitors of all age groups. This is not really surprising, as it actually transports you into a world where you can forget the woes of the present.

With over 7,500 dolls on display, Shankar's International Dolls Museum in the capital not only entertains children but also teaches them about art, culture and the costumes of different communities. The idea of dolls collection was born when eminent political cartoonist and journalist K. Shankar Pillai, better known simply as Shankar, received one as a gift from the Hungarian Ambassador in the early 1950s. Shankar fell so much in love with the doll that he began to collect costume dolls whenever he visited any country.

Soon, he was able to collect a fair number of dolls as his visits to foreign nations were frequent. He began to exhibit the dolls across the country after he was able to collect a sufficient number, but the frequent packing and unpacking was damaging the dolls.

The idea then emerged of a permanent space for the dolls and that is how the museum was setup. The museum is located in Nehru House on Bahadur Shah Zafar Marg in the building that houses the Children's Book Trust, which was also set up by Shankar.

The museum began in 1965 with 1,000 dolls. Now there are more than 7,500 from over 85 countries. The museum has the largest collection of costume dolls in the world. Divided into two equal halves, one section of the museum is dedicated to Western countries like the UK and the US, Australia and New Zealand, as also the Commonwealth of Independent States, and the other half to Asian, African and Middle-East countries, including India. Several countries have gifted dolls to the museum to represent their country's culture.

Apart from those dolls received in exchange, there are numerous dolls made at the workshop attached to the museum, including authentic Indian dolls in traditional attire. The dolls are sent as 'return gifts' for the dolls gifted by various countries.

#### SubQuestion No : 5

**Q.5** According to the passage what is meant by the expression "it actually transports you".

- (1) takes you to dolls museum
- (2) takes you to Western countries
- (3) takes you away from your present worries
- (4) takes you to exhibitions in different part of the world

**Options** 1. 1

2. 2

3. 3

4. 4



Question Type : **MCQ**

Question ID : **4795483586**

Option 1 ID : **47954814201**

Option 2 ID : **47954814202**

Option 3 ID : **47954814203**

Option 4 ID : **47954814204**

Status : **Answered**

Chosen Option : **3**



### Comprehension:

Read the given passage carefully and answer the question that follow :

At a time when younger people are privileging smartphones, televisions and video games over other sources of entertainment, a nearly 55-year-old museum housing thousands of dolls from across the globe is still maintaining its old world charm and attracting not only children and teenagers, but also the visitors of all age groups. This is not really surprising, as it actually transports you into a world where you can forget the woes of the present.

With over 7,500 dolls on display, Shankar's International Dolls Museum in the capital not only entertains children but also teaches them about art, culture and the costumes of different communities. The idea of dolls collection was born when eminent political cartoonist and journalist K. Shankar Pillai, better known simply as Shankar, received one as a gift from the Hungarian Ambassador in the early 1950s. Shankar fell so much in love with the doll that he began to collect costume dolls whenever he visited any country.

Soon, he was able to collect a fair number of dolls as his visits to foreign nations were frequent. He began to exhibit the dolls across the country after he was able to collect a sufficient number, but the frequent packing and unpacking was damaging the dolls.

The idea then emerged of a permanent space for the dolls and that is how the museum was setup. The museum is located in Nehru House on Bahadur Shah Zafar Marg in the building that houses the Children's Book Trust, which was also set up by Shankar.

The museum began in 1965 with 1,000 dolls. Now there are more than 7,500 from over 85 countries. The museum has the largest collection of costume dolls in the world. Divided into two equal halves, one section of the museum is dedicated to Western countries like the UK and the US, Australia and New Zealand, as also the Commonwealth of Independent States, and the other half to Asian, African and Middle-East countries, including India. Several countries have gifted dolls to the museum to represent their country's culture.

Apart from those dolls received in exchange, there are numerous dolls made at the workshop attached to the museum, including authentic Indian dolls in traditional attire. The dolls are sent as 'return gifts' for the dolls gifted by various countries.

#### SubQuestion No : 6

**Q.6** Shankar's International Dolls Museum came up as a permanent exhibit because :

- (1) Museum is a good source of income.
- (2) Only museums can preserve traditions and cultures.
- (3) Frequent travels for their exhibition and their packing and unpacking was damaging the dolls.
- (4) The dolls represent the achievements of that country.

**Options** 1. 1  
2. 2  
3. 3  
4. 4

Question Type : **MCQ**  
Question ID : **4795483588**  
Option 1 ID : **47954814209**  
Option 2 ID : **47954814210**  
Option 3 ID : **47954814211**  
Option 4 ID : **47954814212**  
Status : **Answered**  
Chosen Option : **3**

**Comprehension:**

Read the given passage carefully and answer the question that follow :

At a time when younger people are privileging smartphones, televisions and video games over other sources of entertainment, a nearly 55-year-old museum housing thousands of dolls from across the globe is still maintaining its old world charm and attracting not only children and teenagers, but also the visitors of all age groups. This is not really surprising, as it actually transports you into a world where you can forget the woes of the present.

With over 7,500 dolls on display, Shankar’s International Dolls Museum in the capital not only entertains children but also teaches them about art, culture and the costumes of different communities. The idea of dolls collection was born when eminent political cartoonist and journalist K. Shankar Pillai, better known simply as Shankar, received one as a gift from the Hungarian Ambassador in the early 1950s. Shankar fell so much in love with the doll that he began to collect costume dolls whenever he visited any country.

Soon, he was able to collect a fair number of dolls as his visits to foreign nations were frequent. He began to exhibit the dolls across the country after he was able to collect a sufficient number, but the frequent packing and unpacking was damaging the dolls.

The idea then emerged of a permanent space for the dolls and that is how the museum was setup. The museum is located in Nehru House on Bahadur Shah Zafar Marg in the building that houses the Children’s Book Trust, which was also set up by Shankar.

The museum began in 1965 with 1,000 dolls. Now there are more than 7,500 from over 85 countries. The museum has the largest collection of costume dolls in the world. Divided into two equal halves, one section of the museum is dedicated to Western countries like the UK and the US, Australia and New Zealand, as also the Commonwealth of Independent States, and the other half to Asian, African and Middle-East countries, including India. Several countries have gifted dolls to the museum to represent their country’s culture.

Apart from those dolls received in exchange, there are numerous dolls made at the workshop attached to the museum, including authentic Indian dolls in traditional attire. The dolls are sent as ‘return gifts’ for the dolls gifted by various countries.

**SubQuestion No : 7**

**Q.7** Which of the given options can be the substituted for the word ‘Authentic’ as used in the passage ?

- (1) Legal
- (2) Genuine
- (3) Traditional
- (4) Handmade

- Options**
- 1. 1
  - 2. 2
  - 3. 3
  - 4. 4

Question Type : **MCQ**  
Question ID : **4795483589**  
Option 1 ID : **47954814213**  
Option 2 ID : **47954814214**  
Option 3 ID : **47954814215**  
Option 4 ID : **47954814216**  
Status : **Answered**  
Chosen Option : **4**

### Comprehension:

Read the given passage carefully and answer the question that follow :

At a time when younger people are privileging smartphones, televisions and video games over other sources of entertainment, a nearly 55-year-old museum housing thousands of dolls from across the globe is still maintaining its old world charm and attracting not only children and teenagers, but also the visitors of all age groups. This is not really surprising, as it actually transports you into a world where you can forget the woes of the present.

With over 7,500 dolls on display, Shankar's International Dolls Museum in the capital not only entertains children but also teaches them about art, culture and the costumes of different communities. The idea of dolls collection was born when eminent political cartoonist and journalist K. Shankar Pillai, better known simply as Shankar, received one as a gift from the Hungarian Ambassador in the early 1950s. Shankar fell so much in love with the doll that he began to collect costume dolls whenever he visited any country.

Soon, he was able to collect a fair number of dolls as his visits to foreign nations were frequent. He began to exhibit the dolls across the country after he was able to collect a sufficient number, but the frequent packing and unpacking was damaging the dolls.

The idea then emerged of a permanent space for the dolls and that is how the museum was setup. The museum is located in Nehru House on Bahadur Shah Zafar Marg in the building that houses the Children's Book Trust, which was also set up by Shankar.

The museum began in 1965 with 1,000 dolls. Now there are more than 7,500 from over 85 countries. The museum has the largest collection of costume dolls in the world. Divided into two equal halves, one section of the museum is dedicated to Western countries like the UK and the US, Australia and New Zealand, as also the Commonwealth of Independent States, and the other half to Asian, African and Middle-East countries, including India. Several countries have gifted dolls to the museum to represent their country's culture.

Apart from those dolls received in exchange, there are numerous dolls made at the workshop attached to the museum, including authentic Indian dolls in traditional attire. The dolls are sent as 'return gifts' for the dolls gifted by various countries.

#### SubQuestion No : 8

Q.8 Which of the following has been set up by K. Shankar Pillai ?

- (1) International Dolls Museum
- (2) Nehru House
- (3) Bahadur Shah Zafar Marg
- (4) Hungarian Ambassador

Options 1. 1  
2. 2  
3. 3  
4. 4



Question Type : MCQ

Question ID : 4795483592

Option 1 ID : 47954814225

Option 2 ID : 47954814226

Option 3 ID : 47954814227

Option 4 ID : 47954814228

Status : Answered

Chosen Option : 1



### Comprehension:

Read the given passage carefully and answer the question that follow :

At a time when younger people are privileging smartphones, televisions and video games over other sources of entertainment, a nearly 55-year-old museum housing thousands of dolls from across the globe is still maintaining its old world charm and attracting not only children and teenagers, but also the visitors of all age groups. This is not really surprising, as it actually transports you into a world where you can forget the woes of the present.

With over 7,500 dolls on display, Shankar's International Dolls Museum in the capital not only entertains children but also teaches them about art, culture and the costumes of different communities. The idea of dolls collection was born when eminent political cartoonist and journalist K. Shankar Pillai, better known simply as Shankar, received one as a gift from the Hungarian Ambassador in the early 1950s. Shankar fell so much in love with the doll that he began to collect costume dolls whenever he visited any country.

Soon, he was able to collect a fair number of dolls as his visits to foreign nations were frequent. He began to exhibit the dolls across the country after he was able to collect a sufficient number, but the frequent packing and unpacking was damaging the dolls.

The idea then emerged of a permanent space for the dolls and that is how the museum was setup. The museum is located in Nehru House on Bahadur Shah Zafar Marg in the building that houses the Children's Book Trust, which was also set up by Shankar.

The museum began in 1965 with 1,000 dolls. Now there are more than 7,500 from over 85 countries. The museum has the largest collection of costume dolls in the world. Divided into two equal halves, one section of the museum is dedicated to Western countries like the UK and the US, Australia and New Zealand, as also the Commonwealth of Independent States, and the other half to Asian, African and Middle-East countries, including India. Several countries have gifted dolls to the museum to represent their country's culture.

Apart from those dolls received in exchange, there are numerous dolls made at the workshop attached to the museum, including authentic Indian dolls in traditional attire. The dolls are sent as 'return gifts' for the dolls gifted by various countries.

#### SubQuestion No : 9

**Q.9** Which of the following is correct ?

- (1) The museum is divided into two sections for dolls from different countries.
- (2) Countries gifted their dolls because Shankar asked for them to be donated for the museum.
- (3) The dolls are all return gifts.
- (4) The authentic Indian dolls are hard to find in the museum.

**Options** 1. 1  
2. 2  
3. 3  
4. 4

Question Type : **MCQ**

Question ID : **4795483594**

Option 1 ID : **47954814233**

Option 2 ID : **47954814234**

Option 3 ID : **47954814235**

Option 4 ID : **47954814236**

Status : **Answered**

Chosen Option : 1

**Comprehension:**

Read the given passage carefully and answer the question that follow :

At a time when younger people are privileging smartphones, televisions and video games over other sources of entertainment, a nearly 55-year-old museum housing thousands of dolls from across the globe is still maintaining its old world charm and attracting not only children and teenagers, but also the visitors of all age groups. This is not really surprising, as it actually transports you into a world where you can forget the woes of the present.

With over 7,500 dolls on display, Shankar’s International Dolls Museum in the capital not only entertains children but also teaches them about art, culture and the costumes of different communities. The idea of dolls collection was born when eminent political cartoonist and journalist K. Shankar Pillai, better known simply as Shankar, received one as a gift from the Hungarian Ambassador in the early 1950s. Shankar fell so much in love with the doll that he began to collect costume dolls whenever he visited any country.

Soon, he was able to collect a fair number of dolls as his visits to foreign nations were frequent. He began to exhibit the dolls across the country after he was able to collect a sufficient number, but the frequent packing and unpacking was damaging the dolls.

The idea then emerged of a permanent space for the dolls and that is how the museum was setup. The museum is located in Nehru House on Bahadur Shah Zafar Marg in the building that houses the Children’s Book Trust, which was also set up by Shankar.

The museum began in 1965 with 1,000 dolls. Now there are more than 7,500 from over 85 countries. The museum has the largest collection of costume dolls in the world. Divided into two equal halves, one section of the museum is dedicated to Western countries like the UK and the US, Australia and New Zealand, as also the Commonwealth of Independent States, and the other half to Asian, African and Middle-East countries, including India. Several countries have gifted dolls to the museum to represent their country’s culture.

Apart from those dolls received in exchange, there are numerous dolls made at the workshop attached to the museum, including authentic Indian dolls in traditional attire. The dolls are sent as ‘return gifts’ for the dolls gifted by various countries.

**SubQuestion No : 10**

- Q.10** According to the passage, Shankar’s International Dolls Museum does not merely entertain children but also :
- (1) enabled Shankar to visit a number of foreign countries for him to be able to enrich himself monetarily.
  - (2) teaches children about art and culture as well as about costumes of different cultures.
  - (3) encourages children privileging smartphones, television and video games to continue with the same source of entertainment.
  - (4) helps children familiarise themselves with Nehru House located in one of the prime locations in Delhi.

- Options**
- 1. 1
  - 2. 2
  - 3. 3
  - 4. 4



Question Type : **MCQ**  
Question ID : **4795483595**  
Option 1 ID : **47954814237**  
Option 2 ID : **47954814238**  
Option 3 ID : **47954814239**  
Option 4 ID : **47954814240**  
Status : **Answered**  
Chosen Option : **2**



**Q.11** Fill in the blanks by choosing the correct option :

I have great fondness \_\_\_\_\_ classical music and I am particularly fond \_\_\_\_\_ western classical music.

- (1) for, of
- (2) of, of
- (3) with, by
- (4) at, with

**Options** 1. 1

2. 2

3. 3

4. 4

Question Type : **MCQ**

Question ID : **4795483600**

Option 1 ID : **47954814257**

Option 2 ID : **47954814258**

Option 3 ID : **47954814259**

Option 4 ID : **47954814260**

Status : **Answered**

Chosen Option : **2**

**Q.12** Change into the Passive Voice :

Always speak the truth.

- (1) Always truth should be spoken.
- (2) The truth has to be spoken always.
- (3) The truth should always be spoken.
- (4) The truth must be spoken always.

**Options** 1. 1

2. 2

3. 3

4. 4

Question Type : **MCQ**

Question ID : **4795483612**

Option 1 ID : **47954814305**

Option 2 ID : **47954814306**

Option 3 ID : **47954814307**

Option 4 ID : **47954814308**

Status : **Answered**

Chosen Option : **3**

**Q.13** Choose the most appropriate word to fill in the blank :

You are not justified \_\_\_\_\_ laying the blame \_\_\_\_\_ my door.

- (1) in, over
- (2) at, at
- (3) in, at
- (4) over, at

**Options** 1. 1

2. 2

3. 3

4. 4

Question Type : **MCQ**

Question ID : **4795483597**

Option 1 ID : **47954814245**

Option 2 ID : **47954814246**

Option 3 ID : **47954814247**

Option 4 ID : **47954814248**

Status : **Answered**

Chosen Option : **3**

**Q.14** Change into Indirect Narration :

Peter said to Ronita, "Merry Christmas".

- (1) Peter wished Ronita Merry Christmas.
- (2) Peter said Merry Christmas.
- (3) Peter told Merry Christmas to Ronita.
- (4) Peter said to Ronita that it was Merry Christmas.

**Options** 1. 1

2. 2

3. 3

4. 4

Question Type : **MCQ**

Question ID : **4795483609**

Option 1 ID : **47954814293**

Option 2 ID : **47954814294**

Option 3 ID : **47954814295**

Option 4 ID : **47954814296**

Status : **Answered**

Chosen Option : **1**

**Q.15** Change to the Passive Voice :

Do not pluck flowers.

- (1) Flowers not be plucked.
- (2) Let flowers not be plucked.
- (3) We should not pluck flowers.
- (4) Flowers are not to be plucked.

**Options** 1. 1

2. 2

3. 3

4. 4

Question Type : **MCQ**

Question ID : **4795483615**

Option 1 ID : **47954814317**

Option 2 ID : **47954814318**

Option 3 ID : **47954814319**

Option 4 ID : **47954814320**

Status : **Answered**

Chosen Option : **4**

**Q.16** Spot the error :

Rutherford's nuclear model/ is a major step/ towards how we see/ the atom today

(A)

(B)

(C)

(D)

(1) (A)

(2) (B)

(3) (C)

(4) (D)

**Options** 1. 1

2. 2

3. 3

4. 4

Question Type : **MCQ**

Question ID : **4795483603**

Option 1 ID : **47954814269**

Option 2 ID : **47954814270**

Option 3 ID : **47954814271**

Option 4 ID : **47954814272**

Status : **Answered**

Chosen Option : **4**



Q.17 Change into the Passive Voice :

Be Smart.

- (1) You are told to be smart.
- (2) You are asked to be smart.
- (3) You must be smart.
- (4) You are advised to be smart.

Options 1. 1

2. 2

3. 3

4. 4

Question Type : **MCQ**

Question ID : 4795483614

Option 1 ID : 47954814313

Option 2 ID : 47954814314

Option 3 ID : 47954814315

Option 4 ID : 47954814316

Status : **Answered**

Chosen Option : 4

Q.18 Change into Indirect Narration :

The teacher said, "Farewell my students."

- (1) The teacher said farewell to his students.
- (2) The teacher bade farewell to his students.
- (3) The teacher told farewell to his students.
- (4) The teacher wished farewell to his students.

Options 1. 1

2. 2

3. 3

4. 4

Question Type : **MCQ**

Question ID : 4795483610

Option 1 ID : 47954814297

Option 2 ID : 47954814298

Option 3 ID : 47954814299

Option 4 ID : 47954814300

Status : **Answered**

Chosen Option : 4

Q.19 Fill in the blank with the correct option :

I \_\_\_\_\_ in this office since 2020.

- (1) have worked
- (2) am working
- (3) was working
- (4) have been working

Options 1. 1

2. 2

3. 3

4. 4

Question Type : **MCQ**

Question ID : 4795483599

Option 1 ID : 47954814253

Option 2 ID : 47954814254

Option 3 ID : 47954814255

Option 4 ID : 47954814256

Status : **Answered**

Chosen Option : 4

Q.20 Change into the Passive Voice :

I asked Dipali if she went to Agra.

- (1) Dipali was asked if she had gone to Agra.
- (2) Dipali had been asked if she has gone to Agra.
- (3) Dipali is asked if she went to Agra.
- (4) Dipali were asked if she went to Agra.

Options 1. 1

2. 2

3. 3

4. 4

Question Type : **MCQ**

Question ID : 4795483611

Option 1 ID : 47954814301

Option 2 ID : 47954814302

Option 3 ID : 47954814303

Option 4 ID : 47954814304

Status : **Answered**

Chosen Option : 2

**Q.21** Choose the most appropriate word to fill in the blank.

My friend never pays any \_\_\_\_\_ to his superior's \_\_\_\_\_.

- (1) head, lecture
- (2) heed, lecture
- (3) head, curtain lecture
- (4) heed, curtain lecture

**Options** 1. 1  
2. 2  
3. 3  
4. 4

Question Type : **MCQ**  
Question ID : **4795483605**  
Option 1 ID : **47954814277**  
Option 2 ID : **47954814278**  
Option 3 ID : **47954814279**  
Option 4 ID : **47954814280**  
Status : **Answered**  
Chosen Option : **2**

**Q.22** Choose the most appropriate word to fill in the blank.

Seema keeps all her \_\_\_\_\_ papers in a safe to which only she has the keys.

- (1) required
- (2) necessary
- (3) vital
- (4) confidential

**Options** 1. 1  
2. 2  
3. 3  
4. 4

Question Type : **MCQ**  
Question ID : **4795483596**  
Option 1 ID : **47954814241**  
Option 2 ID : **47954814242**  
Option 3 ID : **47954814243**  
Option 4 ID : **47954814244**  
Status : **Answered**  
Chosen Option : **4**



**Q.23** Fill in the blank by choosing the most appropriate option from the following :

The word India \_\_\_\_\_ from the Indus river, called Sindhu in Sanskrit.

- (1) derives
- (2) brings
- (3) goes
- (4) stays

**Options** 1. 1

2. 2

3. 3

4. 4

Question Type : **MCQ**

Question ID : **4795483598**

Option 1 ID : **47954814249**

Option 2 ID : **47954814250**

Option 3 ID : **47954814251**

Option 4 ID : **47954814252**

Status : **Answered**

Chosen Option : **1**

**Q.24** Change into Indirect Speech :

The Mother asked Akshay, "You did not meet Sonia, did you ?"

- (1) The mother asked Akshay that he did not meet Sonia, didn't he.
- (2) The mother asked Akshay if he had met Sonia.
- (3) The mother asked Akshay if he hadn't met Sonia.
- (4) The mother asked Akshay whether he met Sonia or not.

**Options** 1. 1

2. 2

3. 3

4. 4

Question Type : **MCQ**

Question ID : **4795483606**

Option 1 ID : **47954814281**

Option 2 ID : **47954814282**

Option 3 ID : **47954814283**

Option 4 ID : **47954814284**

Status : **Answered**

Chosen Option : **1**





**Q.25** Spot the error :

Organisms such as/ Hydra uses/ regenerative cells for reproduction/ in the process of budding.

- (A) (B) (C) (D)
- (1) (A)
- (2) (B)
- (3) (C)
- (4) (D)

- Options**
1. 1
2. 2
3. 3
4. 4

Question Type : **MCQ**  
Question ID : **4795483602**  
Option 1 ID : **47954814265**  
Option 2 ID : **47954814266**  
Option 3 ID : **47954814267**  
Option 4 ID : **47954814268**  
Status : **Answered**  
Chosen Option : **3**

**Q.26** Rearrange the following sentences in logical order to form a coherent paragraph.

- (A) People from across the frontiers came into the subcontinent and settled here.
- (B) While it was difficult to cross frontiers, those who wanted to scaled the mountains and crossed the seas.
- (C) Hills, mountains and seas form the natural frontiers of a subcontinent.
- (D) These movements of people were responsible for enriching the cultural traditions of the subcontinent.
- (1) (A) (C) (B) (D)
- (2) (D) (C) (A) (B)
- (3) (C) (D) (A) (B)
- (4) (C) (A) (B) (D)

- Options**
1. 1
2. 2
3. 3
4. 4

Question Type : **MCQ**  
Question ID : **4795483601**  
Option 1 ID : **47954814261**  
Option 2 ID : **47954814262**  
Option 3 ID : **47954814263**  
Option 4 ID : **47954814264**  
Status : **Answered**  
Chosen Option : **4**



**Q.27** Change into Indirect speech :

I said to Deepa, "Let us buy a new house."

- (1) I suggested to Deepa that we should buy a new house.
- (2) I told Deepa to buy a new house.
- (3) I told Deepa that we could buy a new house.
- (4) I suggested to Deepa that let us buy a new house.

**Options** 1. 1  
2. 2  
3. 3  
4. 4

Question Type : **MCQ**  
Question ID : **4795483607**  
Option 1 ID : **47954814285**  
Option 2 ID : **47954814286**  
Option 3 ID : **47954814287**  
Option 4 ID : **47954814288**  
Status : **Answered**  
Chosen Option : 1

**Q.28** Change into Indirect Speech :

The teacher said to Suhani, "Will you stop talking now ?"

- (1) The teacher told Suhani if she would stop talking.
- (2) The teacher asked Suhani to stop talking now.
- (3) The teacher said to Suhani to stop talking hence.
- (4) The teacher asked Suhani to stop talking.

**Options** 1. 1  
2. 2  
3. 3  
4. 4

Question Type : **MCQ**  
Question ID : **4795483608**  
Option 1 ID : **47954814289**  
Option 2 ID : **47954814290**  
Option 3 ID : **47954814291**  
Option 4 ID : **47954814292**  
Status : **Answered**  
Chosen Option : 4

Q.29 Change to the Passive Voice :

It is time to close the shop.

- (1) It is time for the close of the shop.
- (2) It was time for the shop to be close.
- (3) It is time for the shop to be closed.
- (4) Close the shop, it is time.

Options 1. 1

2. 2

3. 3

4. 4

Question Type : **MCQ**

Question ID : 4795483613

Option 1 ID : 47954814309

Option 2 ID : 47954814310

Option 3 ID : 47954814311

Option 4 ID : 47954814312

Status : **Answered**

Chosen Option : 3

Q.30 Choose the most appropriate word/s to fill in the blank.

She won the race \_\_\_\_\_.

- (1) fair
- (2) square and fair
- (3) fair and square
- (4) to-the-point

Options 1. 1

2. 2

3. 3

4. 4

Question Type : **MCQ**

Question ID : 4795483604

Option 1 ID : 47954814273

Option 2 ID : 47954814274

Option 3 ID : 47954814275

Option 4 ID : 47954814276

Status : **Answered**

Chosen Option : 3

**Comprehension:**

Fill in the blank :

The Survey of India \_\_ (A) \_\_ established in 1878. While the maps that were \_\_ (B) \_\_ give us a lot of information, they also \_\_ (C) \_\_ the bias of the British rulers. Large settlements of the poor in towns \_\_ (D) \_\_ unmarked on maps because they seemed \_\_ (E) \_\_ to the rulers.

**SubQuestion No : 31**

- Q.31
- (A) (1) is
- (2) were
- (3) was
- (4) had

- Options
- 1
  - 2
  - 3
  - 4

Question Type : MCQ  
Question ID : 4795483617  
Option 1 ID : 47954814321  
Option 2 ID : 47954814322  
Option 3 ID : 47954814323  
Option 4 ID : 47954814324  
Status : Answered  
Chosen Option : 3

**Comprehension:**

Fill in the blank :

The Survey of India \_\_ (A) \_\_ established in 1878. While the maps that were \_\_ (B) \_\_ give us a lot of information, they also \_\_ (C) \_\_ the bias of the British rulers. Large settlements of the poor in towns \_\_ (D) \_\_ unmarked on maps because they seemed \_\_ (E) \_\_ to the rulers.

**SubQuestion No : 32**

- Q.32
- (E) (1) unimportant
- (2) unprepared
- (3) important
- (4) resourceful

- Options
- 1
  - 2
  - 3
  - 4

Question Type : MCQ  
Question ID : 4795483621  
Option 1 ID : 47954814337  
Option 2 ID : 47954814338  
Option 3 ID : 47954814339  
Option 4 ID : 47954814340  
Status : Answered  
Chosen Option : 4

**Comprehension:**

Fill in the blank :

The Survey of India \_\_ (A) \_\_ established in 1878. While the maps that were \_\_ (B) \_\_ give us a lot of information, they also \_\_ (C) \_\_ the bias of the British rulers. Large settlements of the poor in towns \_\_ (D) \_\_ unmarked on maps because they seemed \_\_ (E) \_\_ to the rulers.

**SubQuestion No : 33**

- Q.33** (B) (1) preempted  
(2) preluded  
(3) prejudged  
(4) prepared

- Options** 1. 1  
2. 2  
3. 3  
4. 4

Question Type : **MCQ**  
Question ID : **4795483618**  
Option 1 ID : **47954814325**  
Option 2 ID : **47954814326**  
Option 3 ID : **47954814327**  
Option 4 ID : **47954814328**  
Status : **Answered**  
Chosen Option : 1

**Comprehension:**

Fill in the blank :

The Survey of India \_\_ (A) \_\_ established in 1878. While the maps that were \_\_ (B) \_\_ give us a lot of information, they also \_\_ (C) \_\_ the bias of the British rulers. Large settlements of the poor in towns \_\_ (D) \_\_ unmarked on maps because they seemed \_\_ (E) \_\_ to the rulers.

**SubQuestion No : 34**

- Q.34** (D) (1) go  
(2) gone  
(3) went  
(4) is

- Options** 1. 1  
2. 2  
3. 3  
4. 4

Question Type : **MCQ**  
Question ID : **4795483620**  
Option 1 ID : **47954814333**  
Option 2 ID : **47954814334**  
Option 3 ID : **47954814335**  
Option 4 ID : **47954814336**  
Status : **Answered**  
Chosen Option : 3

**Comprehension:**

Fill in the blank :

The Survey of India \_\_\_\_(A)\_\_\_\_ established in 1878. While the maps that were \_\_\_\_(B)\_\_\_\_ give us a lot of information, they also \_\_\_\_(C)\_\_\_\_ the bias of the British rulers. Large settlements of the poor in towns \_\_\_\_(D)\_\_\_\_ unmarked on maps because they seemed \_\_\_\_(E)\_\_\_\_ to the rulers.

**SubQuestion No : 35**

- Q.35** (C) (1) reflect  
(2) rejoin  
(3) redact  
(4) rankle

- Options** 1. 1  
2. 2  
3. 3  
4. 4

Question Type : **MCQ**

Question ID : **4795483619**

Option 1 ID : **47954814329**

Option 2 ID : **47954814330**

Option 3 ID : **47954814331**

Option 4 ID : **47954814332**

Status : **Answered**

Chosen Option : **3**

- Q.36** Complete the following sentence by choosing the most appropriate question tag :

You can make question tags, \_\_\_\_\_ ?

- (1) can you  
(2) can't you  
(3) will you  
(4) won't you

- Options** 1. 1  
2. 2  
3. 3  
4. 4

Question Type : **MCQ**

Question ID : **4795483627**

Option 1 ID : **47954814361**

Option 2 ID : **47954814362**

Option 3 ID : **47954814363**

Option 4 ID : **47954814364**

Status : **Answered**

Chosen Option : **1**

**Q.37** Choose the correctly spelt word.

- (1) leighen
- (2) legendery
- (3) leverege
- (4) liaison

**Options** 1. 1

2. 2

3. 3

4. 4

Question Type : **MCQ**

Question ID : **4795483629**

Option 1 ID : **47954814369**

Option 2 ID : **47954814370**

Option 3 ID : **47954814371**

Option 4 ID : **47954814372**

Status : **Answered**

Chosen Option : **2**

**Q.38** Choose the correct option from the following to fill in the blanks :

Between Ram and Shyam, the \_\_\_\_\_ is more intelligent.

- (1) last
- (2) later
- (3) latest
- (4) latter

**Options** 1. 1

2. 2

3. 3

4. 4

Question Type : **MCQ**

Question ID : **4795483633**

Option 1 ID : **47954814385**

Option 2 ID : **47954814386**

Option 3 ID : **47954814387**

Option 4 ID : **47954814388**

Status : **Answered**

Chosen Option : **4**

**Q.39** Choose the most appropriate antonym from the given options :

‘Adamant’

- (1) Amass
- (2) Consonance
- (3) Obdurate
- (4) Flexible

- Options**
- 1. 1
  - 2. 2
  - 3. 3
  - 4. 4

Question Type : **MCQ**  
Question ID : **4795483622**  
Option 1 ID : **47954814341**  
Option 2 ID : **47954814342**  
Option 3 ID : **47954814343**  
Option 4 ID : **47954814344**  
Status : **Not Answered**  
Chosen Option : --

**Q.40** Match correctly the contents of **List (A)** with the contents of **List (B)**.

- | List (A)                      | List (B)   |
|-------------------------------|--|
| (I) break ground              | (A) to have disposed of the main part of the task assigned |
| (II) break the ice            | (B) to commence an undertaking                             |
| (III) break the back of a job | (C) to leave a place where you have been hiding            |
| (IV) break cover              | (D) to start conversations                                 |

- (1) (I)-(A), (II)-(D), (III)-(B), (IV)-(C)
- (2) (I)-(B), (II)-(D), (III)-(A), (IV)-(C)
- (3) (I)-(B), (II)-(A), (III)-(D), (IV)-(C)
- (4) (I)-(D), (II)-(A), (III)-(C), (IV)-(B)

- Options**
- 1. 1
  - 2. 2
  - 3. 3
  - 4. 4

Question Type : **MCQ**  
Question ID : **4795483631**  
Option 1 ID : **47954814377**  
Option 2 ID : **47954814378**  
Option 3 ID : **47954814379**  
Option 4 ID : **47954814380**  
Status : **Answered**  
Chosen Option : 1



**Q.41** Choose the most appropriate synonym from the given options :

‘Scorching’

- (1) Searing
- (2) Agile
- (3) Law
- (4) Condition

**Options** 1. 1  
2. 2  
3. 3  
4. 4

Question Type : **MCQ**  
Question ID : **4795483623**  
Option 1 ID : **47954814345**  
Option 2 ID : **47954814346**  
Option 3 ID : **47954814347**  
Option 4 ID : **47954814348**  
Status : **Not Answered**  
Chosen Option : --

**Q.42** Complete the following sentence by choosing the most appropriate question tag :

Linda and Ramesh had been seeing each other for years, \_\_\_\_\_

- (1) aren't they ?
- (2) hadn't they ?
- (3) been they ?
- (4) hadn't been they ?

**Options** 1. 1  
2. 2  
3. 3  
4. 4

Question Type : **MCQ**  
Question ID : **4795483628**  
Option 1 ID : **47954814365**  
Option 2 ID : **47954814366**  
Option 3 ID : **47954814367**  
Option 4 ID : **47954814368**  
Status : **Answered**  
Chosen Option : 4



**Q.43** Which part of the following sentence has an error ?

"Under no circumstances/I can help you/in this Venture", said Sita/No error  
(A) (B) (C) (D)

- (1) (A)
- (2) (B)
- (3) (C)
- (4) (D)

**Options** 1. 1  
2. 2  
3. 3  
4. 4

Question Type : **MCQ**  
Question ID : **4795483632**  
Option 1 ID : **47954814381**  
Option 2 ID : **47954814382**  
Option 3 ID : **47954814383**  
Option 4 ID : **47954814384**  
Status : **Answered**  
Chosen Option : **4**

**Q.44** Choose the word from the options that is opposite in meaning to :

'Pursuit'

- (1) Swerve
- (2) Sway
- (3) Avoidance
- (4) Persuade

**Options** 1. 1  
2. 2  
3. 3  
4. 4

Question Type : **MCQ**  
Question ID : **4795483625**  
Option 1 ID : **47954814353**  
Option 2 ID : **47954814354**  
Option 3 ID : **47954814355**  
Option 4 ID : **47954814356**  
Status : **Answered**  
Chosen Option : **3**



**Q.45** Choose the word from the following options that is opposite in meaning to :

‘Defendant’

- (1) Client
- (2) Jury
- (3) Judge
- (4) Plaintiff

**Options** 1. 1  
2. 2  
3. 3  
4. 4

Question Type : **MCQ**  
Question ID : **4795483626**  
Option 1 ID : **47954814357**  
Option 2 ID : **47954814358**  
Option 3 ID : **47954814359**  
Option 4 ID : **47954814360**  
Status : **Answered**  
Chosen Option : 1

**Q.46** Fill in the blanks with the appropriate words :

In order to \_\_\_\_\_ the tension brewing in the crowd, the police decided to \_\_\_\_\_ it.

- (1) defuse; disperse
- (2) diffuse; defuse
- (3) defuse; desperse
- (4) disperse; diffuse

**Options** 1. 1  
2. 2  
3. 3  
4. 4

Question Type : **MCQ**  
Question ID : **4795483630**  
Option 1 ID : **47954814373**  
Option 2 ID : **47954814374**  
Option 3 ID : **47954814375**  
Option 4 ID : **47954814376**  
Status : **Answered**  
Chosen Option : 1



**Q.47** Choose the most appropriate option to fill in the blank :

I am very grateful \_\_\_\_\_ your kindness.

- (1) to
- (2) by
- (3) towards
- (4) for

**Options** 1. 1

2. 2

3. 3

4. 4

Question Type : **MCQ**

Question ID : **4795483635**

Option 1 ID : **47954814393**

Option 2 ID : **47954814394**

Option 3 ID : **47954814395**

Option 4 ID : **47954814396**

Status : **Answered**

Chosen Option : 1

**Q.48** Choose the word similar in meaning as the given word :

‘COMPENDIOUS’

- (1) Succinct
- (2) Unbearable
- (3) Comprehensive
- (4) Elaborate

**Options** 1. 1

2. 2

3. 3

4. 4

Question Type : **MCQ**

Question ID : **4795483624**

Option 1 ID : **47954814349**

Option 2 ID : **47954814350**

Option 3 ID : **47954814351**

Option 4 ID : **47954814352**

Status : **Not Answered**

Chosen Option : --



**Q.49** Choose the most appropriate option to fill in the blank :

Divide these twelve toffees \_\_\_\_\_ the three boys.

- (1) between
- (2) amongst
- (3) with
- (4) amidst

**Options** 1. 1

2. 2

3. 3

4. 4

Question Type : **MCQ**

Question ID : **4795483636**

Option 1 ID : **47954814397**

Option 2 ID : **47954814398**

Option 3 ID : **47954814399**

Option 4 ID : **47954814400**

Status : **Answered**

Chosen Option : **2**

**Q.50** Choose the most appropriate option from the following to fill in the blank :

Leela lost the key. She \_\_\_\_\_ had to break the lock open.

- (1) still
- (2) so
- (3) therefore
- (4) thereby

**Options** 1. 1

2. 2

3. 3

4. 4

Question Type : **MCQ**

Question ID : **4795483634**

Option 1 ID : **47954814389**

Option 2 ID : **47954814390**

Option 3 ID : **47954814391**

Option 4 ID : **47954814392**

Status : **Answered**

Chosen Option : **3**

Section : **Computer Literacy**

- Q.1** The respective Hexadecimal and Octal equivalent representation of the binary number 10111111011110010 is :
- (1) BF790 and 576744
  - (2) BAF02 and 263772
  - (3) 17EF2 and 277362
  - (4) 97FB0 and 447675

**Options** 1. 1  
2. 2  
3. 3  
4. 4

Question Type : **MCQ**  
Question ID : **4795483644**  
Option 1 ID : **47954814429**  
Option 2 ID : **47954814430**  
Option 3 ID : **47954814431**  
Option 4 ID : **47954814432**  
Status : **Not Answered**  
Chosen Option : --

- Q.2** Universal Serial Bus (USB) is a standard method for transferring data between a computer and a number of devices. The USB cable consists of \_\_\_\_\_.
- (1) Four-wired shielded cable - two wires for power and earth and two wires used for data transmission
  - (2) Eight-wired shielded cable - two wires for power and earth and six wires used for data transmission
  - (3) Six-wired shielded cable - two wires for power, two wires for earth and two wires used for data transmission
  - (4) Two-wired shielded cable - one wire for power and one wire used for data transmission

**Options** 1. 1  
2. 2  
3. 3  
4. 4

Question Type : **MCQ**  
Question ID : **4795483640**  
Option 1 ID : **47954814413**  
Option 2 ID : **47954814414**  
Option 3 ID : **47954814415**  
Option 4 ID : **47954814416**  
Status : **Answered**  
Chosen Option : 1

**Q.3** When we create a document in MS-Word, we may wish to align the lines of text in any paragraph. Aligning the lines of text at both the ends of the page is called \_\_\_\_\_.

- (1) Left alignment
- (2) Right alignment
- (3) Center alignment
- (4) Justify alignment

**Options** 1. 1

- 2. 2
- 3. 3
- 4. 4

Question Type : **MCQ**

Question ID : **4795483641**

Option 1 ID : **47954814417**

Option 2 ID : **47954814418**

Option 3 ID : **47954814419**

Option 4 ID : **47954814420**

Status : **Answered**

Chosen Option : 4

**Q.4** Which of the following are the purposes of a router ?

- (A) To connect two or more networks together.
- (B) To forward packets between networks.
- (C) To route packets to their destinations.

Choose the most appropriate answer from the options given below :

- (1) (A) and (B) only
- (2) (B) and (C) only
- (3) (A) and (C) only
- (4) (A), (B) and (C)

**Options** 1. 1

- 2. 2
- 3. 3
- 4. 4

Question Type : **MCQ**

Question ID : **4795483639**

Option 1 ID : **47954814409**

Option 2 ID : **47954814410**

Option 3 ID : **47954814411**

Option 4 ID : **47954814412**

Status : **Answered**

Chosen Option : 1



**Q.5** Which of the following statements are **true** in the context of computers ?

- (A) CPU consists of millions of tiny switches called registers.
- (B) ASCII code can represent more than 4 billion different characters or symbols.
- (C) A program is a copy made from secondary memory to primary memory for execution.
- (D) Cache memory performance is often measured in millions of instruction per second.
- (E) Arithmetic Logic Unit gives signal to CPU to perform arithmetic and logic functions.

Choose the most appropriate answer from the options given below :

- (1) (A) and (C) only
- (2) (B) and (D) only
- (3) (C) and (E) only
- (4) (D) and (E) only

**Options** 1. 1

2. 2

3. 3

4. 4

Question Type : **MCQ**

Question ID : **4795483645**

Option 1 ID : **47954814433**

Option 2 ID : **47954814434**

Option 3 ID : **47954814435**

Option 4 ID : **47954814436**

Status : **Answered**

Chosen Option : **3**

**Q.6** Identify the statements which are **false** in the context of computer hardware.

- (A) The sound card translates digital signal into analog signal that drives the speakers.
- (B) The video controller is an interface between the monitor and the CPU.
- (C) A monitor's resolution is determined by the dimension of the monitor.
- (D) The video controller connects the CPU via the databus on the motherboard to the monitor.
- (E) A LCD monitor uses crystals that become opaque when pressure is applied.

Choose the most appropriate answer from the options given below :

- (1) (C) and (E) only
- (2) (A) and (C) only
- (3) (B) and (E) only
- (4) (A) and (D) only

**Options** 1. 1

2. 2

3. 3

4. 4

Question Type : **MCQ**

Question ID : **4795483637**

Option 1 ID : **47954814401**

Option 2 ID : **47954814402**

Option 3 ID : **47954814403**

Option 4 ID : **47954814404**

Status : **Answered**

Chosen Option : **2**



**Q.7** Which one of the following types of the operating system allows critical applications that are required to be executed within a specific period of time ?

- (1) Batch processing operating systems
- (2) Multitasking operating systems
- (3) Real time operating systems
- (4) Embedded operating systems

**Options** 1. 1

2. 2

3. 3

4. 4

Question Type : **MCQ**

Question ID : **4795483642**

Option 1 ID : **47954814421**

Option 2 ID : **47954814422**

Option 3 ID : **47954814423**

Option 4 ID : **47954814424**

Status : **Answered**

Chosen Option : **4**

**Q.8** Which of the following statements are **true** in the context of Bit-map images ?

- (A) They are made up of tiny pixels of different colours.
- (B) Because of the use of pixels, the image size is very less.
- (C) Since images are built up pixel by pixel, the final image is not usually very realistic.
- (D) Possible to alter/edit each of the pixels to change the design of the image.
- (E) It is stored in a way that vector graphic images are stored.

Choose the most appropriate answer from the options given below :

- (1) (A) and (C) only
- (2) (A) and (D) only
- (3) (B) and (E) only
- (4) (B) and (C) only

**Options** 1. 1

2. 2

3. 3

4. 4

Question Type : **MCQ**

Question ID : **4795483646**

Option 1 ID : **47954814437**

Option 2 ID : **47954814438**

Option 3 ID : **47954814439**

Option 4 ID : **47954814440**

Status : **Answered**

Chosen Option : **2**

Q.9

The equivalent of boolean expression,  $F = \overline{AB} + \overline{A} + AB$  is :

- (1) A
- (2) B
- (3) 1
- (4) 0

Options 1. 1  
2. 2  
3. 3  
4. 4

Question Type : MCQ  
Question ID : 4795483638  
Option 1 ID : 47954814405  
Option 2 ID : 47954814406  
Option 3 ID : 47954814407  
Option 4 ID : 47954814408  
Status : Answered  
Chosen Option : 3

Q.10 Which of the following factors **does not** affect the speed of a computer ?

- (A) CPU register
- (B) System clock
- (C) System Bus
- (D) Cache memory
- (E) Keyboard

Choose the most appropriate answer from the options given below :

- (1) (B) and (C) only
- (2) (A) and (D) only
- (3) (C) and (E) only
- (4) (E) only

Options 1. 1  
2. 2  
3. 3  
4. 4

Question Type : MCQ  
Question ID : 4795483643  
Option 1 ID : 47954814425  
Option 2 ID : 47954814426  
Option 3 ID : 47954814427  
Option 4 ID : 47954814428  
Status : Answered  
Chosen Option : 1