



Teachingninja.in



Latest Govt Job updates



Private Job updates



Free Mock tests available

Visit - teachingninja.in



Teachingninja.in

EPFO SSA Stage I

Previous Year Paper
22 Aug, 2023 Shift 2

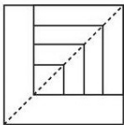


EPFO SSA EXAM - AUGUST 2023

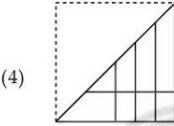
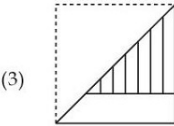
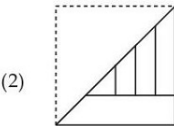
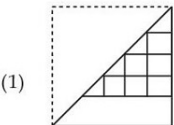
Application No	
Candidate Name	
Roll No	
Test Date	22/08/2023
Test Time	2:00 PM - 4:30 PM
Subject	Social Security Assistant Stage I Examination

Section : General Aptitude

Q.1 In the following question, a square transparent sheet with a pattern is given. Figure out from the four alternatives as to how the pattern would appear when the transparent sheet is folded at the dotted line :



Transparent sheet



- Options 1. 1
2. 2
3. 3
4. 4

Question Type : MCQ
Question ID : 4795483799
Option 1 ID : 47954815041
Option 2 ID : 47954815042
Option 3 ID : 47954815043
Option 4 ID : 47954815044
Status : Answered
Chosen Option : 2

Q.2 If the given interchanges namely : signs + and ÷ and numbers 2 and 4 are made in signs and numbers, which one of the following equations would be correct ?

- (1) $4 \div 2 + 3 = 4$
- (2) $2 + 4 \div 6 = 8$
- (3) $2 + 4 \div 3 = 3$
- (4) $4 + 2 \div 6 = 1.5$

Options 1. 1

- 2. 2
- 3. 3
- 4. 4

Question Type : MCQ

Question ID : 4795483810

Option 1 ID : 47954815085

Option 2 ID : 47954815086

Option 3 ID : 47954815087

Option 4 ID : 47954815088

Status : Answered

Chosen Option : 2

Q.3 If each of the odd digits in the number 54638 is decreased by 1 and each of the even digits is increased by 1, then which of the following will be the sum of the digits of the new number ?

- (1) 26
- (2) 25
- (3) 27
- (4) 28

Options 1. 1

- 2. 2
- 3. 3
- 4. 4

Question Type : MCQ

Question ID : 4795483813

Option 1 ID : 47954815097

Option 2 ID : 47954815098

Option 3 ID : 47954815099

Option 4 ID : 47954815100

Status : Answered

Chosen Option : 2

Q.4 यदि 'paper' को 'wood' कहा जाता है, 'wood' को 'straw' कहा जाता है, 'straw' को 'grass' कहा जाता है, 'grass' को 'rubber' कहा जाता है और 'rubber' को 'cloth' कहा जाता है, तो फर्निचर इनमें से किससे बना है ?

- (1) Wood
- (2) Straw
- (3) Paper
- (4) Grass

Options 1. 1

- 2. 2
- 3. 3
- 4. 4

Question Type : MCQ

Question ID : 4795483809

Option 1 ID : 47954815081

Option 2 ID : 47954815082

Option 3 ID : 47954815083

Option 4 ID : 47954815084

Status : Answered

Chosen Option : 2



Q.5 उस युग्म को चुनिए जिसमें शब्द दिए गए विकल्पों में भिन्न तरीके से संबंधित हैं।

- (1) पायरोहेलियोमीटर : विकिरण
- (2) कैलोरीमीटर : उष्मा
- (3) प्लानीमीटर : क्षेत्रफल
- (4) बैरोमीटर : आर्द्रता

Options 1. 1
2. 2
3. 3
4. 4

Question Type : **MCQ**
Question ID : **4795483824**
Option 1 ID : **47954815141**
Option 2 ID : **47954815142**
Option 3 ID : **47954815143**
Option 4 ID : **47954815144**
Status : **Answered**
Chosen Option : **4**

Q.6 A, B, C, D, E, F and G are sitting around a circle and are facing the centre. G is second to the left of C, who is to the immediate left of F, A is third to the left of E, B is between D and E.

Which of the following is **false** ?

- (1) F is third to the right of D
- (2) A is fourth to the right of E
- (3) B is to the immediate left of D
- (4) G is to the immediate right of D

Options 1. 1
2. 2
3. 3
4. 4

Question Type : **MCQ**
Question ID : **4795483808**
Option 1 ID : **47954815077**
Option 2 ID : **47954815078**
Option 3 ID : **47954815079**
Option 4 ID : **47954815080**
Status : **Answered**
Chosen Option : **1**

Q.7 In a defence message, GET AWAY, FIRE BACK WARDS, MOVE SLOW is coded as NEB CDCL, HOQE TCLP DCQXU, MZWE UFZD respectively. Based on this coding scheme, spot the code for the word "REWARD".

- (1) QEQCDX
- (2) QEDCQX
- (3) XEDCQQ
- (4) QDEQCX

Options 1. 1

- 2. 2
- 3. 3
- 4. 4

Question Type : **MCQ**

Question ID : **4795483827**

Option 1 ID : **47954815153**

Option 2 ID : **47954815154**

Option 3 ID : **47954815155**

Option 4 ID : **47954815156**

Status : **Answered**

Chosen Option : **2**

Q.8 Answer the following question based on the arrangement given below :

WY@2&NC3LPB8↑=D*E4£MV\$7#5GF4

If (A) denotes the number of symbols immediately preceded by a number, (B) denotes the number of letters immediately followed by a symbol and (C) denotes the number of letters either not immediately followed by a number or not immediately preceded by a letter, then which of the following is descending order of the numbers denoted by (A), (B), (C) ?

- (1) (C), (A), (B)
- (2) (B), (A), (C)
- (3) (C), (B), (A)
- (4) (B), (C), (A)

Options 1. 1

- 2. 2
- 3. 3
- 4. 4

Question Type : **MCQ**

Question ID : **4795483805**

Option 1 ID : **47954815065**

Option 2 ID : **47954815066**

Option 3 ID : **47954815067**

Option 4 ID : **47954815068**

Status : **Not Answered**

Chosen Option : **--**



Q.9 The positions of how many letters in the word CHILDREN will remain unchanged when the letters within the word are arranged alphabetically ?

- (1) Two
- (2) One
- (3) Four
- (4) Three

Options 1. 1

- 2. 2
- 3. 3
- 4. 4

Question Type : **MCQ**

Question ID : **4795483828**

Option 1 ID : **47954815157**

Option 2 ID : **47954815158**

Option 3 ID : **47954815159**

Option 4 ID : **47954815160**

Status : **Answered**

Chosen Option : **2**

Q.10 A, B, C, D, E, F, G, H and I are nine houses, C is 2 km East of B. A is 1 km North of B and H is 2 km South of A. G is 1 km West of H while D is 3 km East of G and F is 2 km North of G. I is situated just in middle of B and C while E is just in middle of H and D.

Distance between B and E is :

- (1) 1 km
- (2) $\sqrt{2}$ km
- (3) 1.5 km
- (4) $\sqrt{3}$ km

Options 1. 1

- 2. 2
- 3. 3
- 4. 4

Question Type : **MCQ**

Question ID : **4795483803**

Option 1 ID : **47954815057**

Option 2 ID : **47954815058**

Option 3 ID : **47954815059**

Option 4 ID : **47954815060**

Status : **Answered**

Chosen Option : **2**



Q.11 In a car exhibition, seven cars of seven different companies Cardilac, Ambassador, Fiat, Maruti, Mercedes, Bedford and Fargo were displayed in a row, facing east such that :

- (i) Cardilac car was to the immediate right of Fargo
- (ii) Fargo was fourth to the right of Fiat
- (iii) Maruti car was between Ambassador and Bedford.
- (iv) Fiat, which was third to the left of Ambassador car, was at one of the ends.

Which of the following is definitely **true** ?

- (1) Fargo car is between Ambassador and Fiat
- (2) Cardilac car is to the immediate left of Mercedes
- (3) Fargo is to the immediate right of Cardilac
- (4) Maruti is fourth to the right of Mercedes

- Options**
- 1. 1
 - 2. 2
 - 3. 3
 - 4. 4

Question Type : **MCQ**
Question ID : **4795483819**
Option 1 ID : **47954815121**
Option 2 ID : **47954815122**
Option 3 ID : **47954815123**
Option 4 ID : **47954815124**
Status : **Answered**
Chosen Option : **2**

Q.12 In a family, there are seven members T, U, V, W, X, Y and Z. T is married to U. V is the brother of T. W is the only son of V, who is the father of X. U is the daughter-in-law of Y. Z is the father of V.

How many female members are there in the family ?

- (1) 3
- (2) 4
- (3) 1
- (4) 2

- Options**
- 1. 1
 - 2. 2
 - 3. 3
 - 4. 4

Question Type : **MCQ**
Question ID : **4795483811**
Option 1 ID : **47954815089**
Option 2 ID : **47954815090**
Option 3 ID : **47954815091**
Option 4 ID : **47954815092**
Status : **Answered**
Chosen Option : **4**

Q.13 'P#Q' means 'P is the father of Q'

'P+Q' means 'P is the mother of Q'

'P-Q' means 'P is the brother of Q'

'P*Q' means 'P is the sister of Q'

Which of the following shows that A is D's grandmother ?

(1) $A\#C+B-D$

(2) $A+B\#C-D$

(3) $D\#A+B-C$

(4) $A*B\#C-D$

Options 1. 1

2. 2

3. 3

4. 4

Question Type : MCQ

Question ID : 4795483822

Option 1 ID : 47954815133

Option 2 ID : 47954815134

Option 3 ID : 47954815135

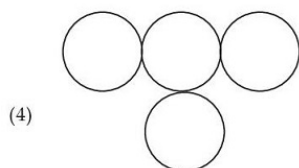
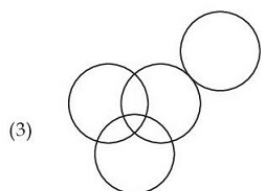
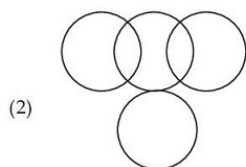
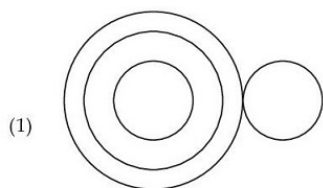
Option 4 ID : 47954815136

Status : Answered

Chosen Option : 2



Q.14 46 विद्यार्थियों की एक कक्षा में, 18 विद्यार्थियों ने फुटबाल खेला, फुटबाल खेलने वाले 6 विद्यार्थियों सहित 17 विद्यार्थियों ने क्रिकेट खेला। क्रिकेट खेलने वाले किंतु फुटबाल न खेलने वाले 4 विद्यार्थियों सहित 16 विद्यार्थियों ने हॉकी खेला। पाँच विद्यार्थियों ने कैरम तो खेला किंतु आउटडोर खेल नहीं खेला। निम्नलिखित कौन-सी आकृति इन तथ्यों को निरूपित करती है ?



- Options** 1. 1
2. 2
3. 3
4. 4

Question Type : **MCQ**
Question ID : **4795483807**
Option 1 ID : **47954815073**
Option 2 ID : **47954815074**
Option 3 ID : **47954815075**
Option 4 ID : **47954815076**
Status : **Answered**
Chosen Option : **2**

Q.15 The question given below consists of two statements numbered (I) and (II).

(I) \$ means \div , * means \times and # means $+$.

(II) $18\$3*4\#6=30$

What is the value of $169\$13*9\#7$?

Decide whether the data provided in the statements is sufficient to answer the question.

- (1) The data in statement (I) alone are sufficient to answer the question, while the data in statement (II) alone are not sufficient to answer the question.
- (2) Statement (II) alone is sufficient to answer, while statement (I) is not sufficient to answer the question
- (3) Either statement (I) alone or statement (II) alone are sufficient
- (4) Both statements are not sufficient to answer the question

Options 1. 1

2. 2

3. 3

4. 4

Question Type : **MCQ**

Question ID : **4795483820**

Option 1 ID : **47954815125**

Option 2 ID : **47954815126**

Option 3 ID : **47954815127**

Option 4 ID : **47954815128**

Status : **Answered**

Chosen Option : **1**



Q.16

<div><div>△</div><div>×</div><div>○</div></div> <div><div>□</div><div>—</div><div>S</div></div>	<div><div>C</div><div>—</div><div>□</div></div> <div><div>×</div><div>○</div><div>▽</div></div>	<div><div>?</div></div>	<div><div>●</div><div>□</div><div>—</div></div> <div><div>○</div><div>×</div><div>∩</div></div>	<div><div>■</div><div>×</div><div>○</div></div> <div><div>□</div><div>—</div><div>●</div></div>
(A)	(B)	(C)	(D)	(E)

Select a suitable figure from the following which will substitute the question mark that is figure C, so that a series is formed by the figures A, B, C, D and E taken in order :

(1)

<div><div>?</div></div>	<div><div>—</div></div>
<div><div>○</div></div>	<div><div>□</div></div>
<div><div>×</div></div>	<div><div>○</div></div>

(2)

<div><div>?</div></div>	<div><div>—</div></div>
<div><div>○</div></div>	<div><div>□</div></div>
<div><div>×</div></div>	<div><div>C</div></div>

(3)

<div><div>△</div></div>	<div><div>×</div></div>
<div><div>—</div></div>	<div><div>○</div></div>
<div><div>□</div></div>	<div><div>C</div></div>

(4)

<div><div>△</div></div>	<div><div>—</div></div>
<div><div>○</div></div>	<div><div>□</div></div>
<div><div>×</div></div>	<div><div>C</div></div>

- Options
1.

2.

3.

4.

Question Type : MCQ
Question ID : 4795483801
Option 1 ID : 47954815049
Option 2 ID : 47954815050
Option 3 ID : 47954815051
Option 4 ID : 47954815052
Status : Answered
Chosen Option : 1

Q.17 Given below is a statement followed by two arguments numbered (I) and (II).

Statement : Should young entrepreneurs be encouraged ?

- Arguments :** (I) Yes, they will help in industrial development of the country.
(II) Yes, they will reduce the burden on employment market.

Decide which of the argument(s) is/are 'strong' ?

- (1) Only argument (I) is strong
- (2) Only argument (II) is strong
- (3) Both (I) and (II) are strong
- (4) Neither (I) nor (II) are strong

Options 1. 1

- 2. 2
- 3. 3
- 4. 4

Question Type : **MCQ**
Question ID : **4795483818**
Option 1 ID : **47954815117**
Option 2 ID : **47954815118**
Option 3 ID : **47954815119**
Option 4 ID : **47954815120**
Status : **Answered**
Chosen Option : **3**

Q.18 In a certain code language,

- (I) 'ka bi pu ya' means 'you are very intelligent'.
- (II) 'ya lo ka wo' means 'they seem very intelligent'.
- (III) 'la pu le' means 'you can see'.
- (IV) 'sun pun yun ya' means 'how intelligent she is'.

Find which of the above statements is/are required to find the exact code of the word 'you'?

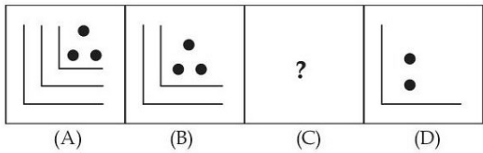
- (1) (I) and (II)
- (2) (II) and (III)
- (3) (I) and (III)
- (4) (III) and (IV)

Options 1. 1


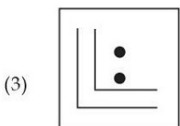
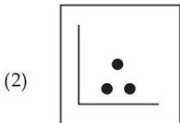
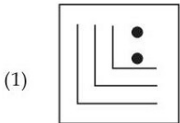
- 2. 2
- 3. 3
- 4. 4

Question Type : **MCQ**
Question ID : **4795483823**
Option 1 ID : **47954815137**
Option 2 ID : **47954815138**
Option 3 ID : **47954815139**
Option 4 ID : **47954815140**
Status : **Answered**
Chosen Option : **3**

Q.19



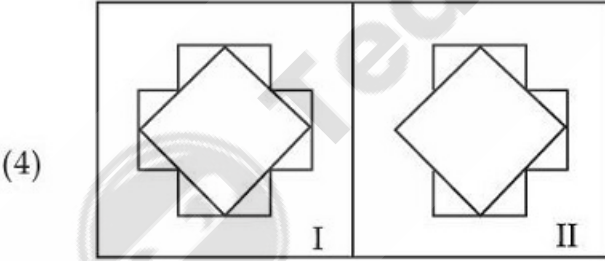
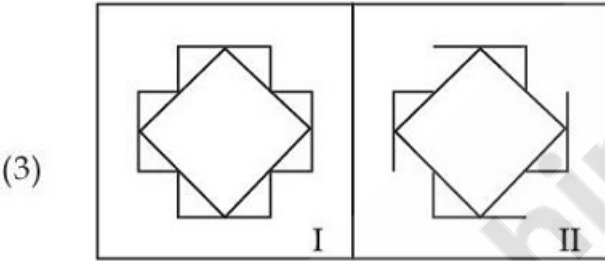
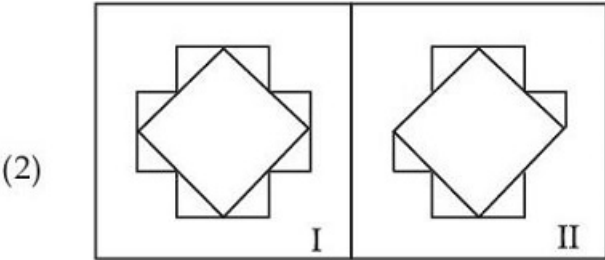
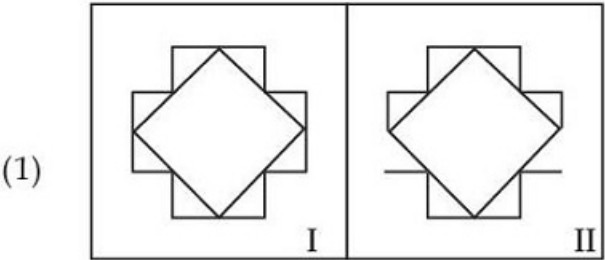
Select a suitable figure from the given alternatives which will substitute the question mark so that a series is formed by figures A, B, C and D taken in order.



- Options 1. 1
2. 2
3. 3
4. 4

Question Type : MCQ
Question ID : 4795483816
Option 1 ID : 47954815109
Option 2 ID : 47954815110
Option 3 ID : 47954815111
Option 4 ID : 47954815112
Status : Answered
Chosen Option : 3

Q.20 Choose out the odd pair of figure among the following :



- Options 1. 1
2. 2
3. 3
4. 4

Question Type : MCQ
Question ID : 4795483815
Option 1 ID : 47954815105
Option 2 ID : 47954815106
Option 3 ID : 47954815107
Option 4 ID : 47954815108
Status : Answered
Chosen Option : 1

Q.21 Six flats on a floor in two rows facing North and South are allotted to P, Q, R, S, T and U. Q gets a North facing flat and is not next to S. S and U get diagonally opposite flats. R, next to U, gets a South facing flat and T gets a North facing flat.

If the flats of T and P are interchanged, whose flat will be next to that of U ?

- (1) P
- (2) T
- (3) Q
- (4) R

- Options**
- 1. 1
 - 2. 2
 - 3. 3
 - 4. 4

Question Type : MCQ
Question ID : 4795483821
Option 1 ID : 47954815129
Option 2 ID : 47954815130
Option 3 ID : 47954815131
Option 4 ID : 47954815132
Status : Answered
Chosen Option : 4

Q.22 If the first five words in the sentence, "Meeta's mother meets me many times" are arranged as per the dictionary, which will be the third word ?

- (1) mother
- (2) meeta
- (3) me
- (4) meets

- Options**
- 1. 1
 - 2. 2
 - 3. 3
 - 4. 4

Question Type : MCQ
Question ID : 4795483806
Option 1 ID : 47954815069
Option 2 ID : 47954815070
Option 3 ID : 47954815071
Option 4 ID : 47954815072
Status : Answered
Chosen Option : 2

Q.23 Find the next term in the alpha-numeric series :

Y4B, W9E, U20H, S43K, Q90N, O185Q, ____?

- (1) S390L
- (2) M203T
- (3) M376T
- (4) T267S

Options 1. 1

2. 2

3. 3

4. 4

Question Type : MCQ

Question ID : 4795483825

Option 1 ID : 47954815145

Option 2 ID : 47954815146

Option 3 ID : 47954815147

Option 4 ID : 47954815148

Status : Answered

Chosen Option : 3

Q.24 Seven ₹ 50 denomination notes, ten ₹ 100 denomination notes, ten ₹ 500 denomination notes and one ₹ 2000 denomination note are distributed among 4 people W, X, Y and Z such that each person has an equal number of notes.

If W has an amount of ₹ 2700, what is the maximum amount that X can have ?

- (1) ₹ 3800
- (2) ₹ 4000
- (3) ₹ 4600
- (4) ₹ 5400

Options 1. 1

2. 2

3. 3

4. 4

Question Type : MCQ

Question ID : 4795483812

Option 1 ID : 47954815093

Option 2 ID : 47954815094

Option 3 ID : 47954815095

Option 4 ID : 47954815096

Status : Answered

Chosen Option : 3



Q.25 प्रदत्त विकल्पों से उस शब्द का पता लगाइए जिसके तीसरे शब्द के साथ ठीक वैसा ही संबंध हो जिस प्रकार से प्रथम शब्द युग्म संबंधित है।

क्रमिक : आकस्मिक : स्नेहपूर्ण :

- (1) छिछला
- (2) खंडन
- (3) विरोधी
- (4) नोटिस (सूचना)

Options 1. 1

- 2. 2
- 3. 3
- 4. 4

Question Type : MCQ

Question ID : 4795483802

Option 1 ID : 47954815053

Option 2 ID : 47954815054

Option 3 ID : 47954815055

Option 4 ID : 47954815056

Status : Answered

Chosen Option : 3

Q.26 When seen through a mirror, a clock shows 8 : 30. What is the correct time ?

- (1) 2 : 30
- (2) 3 : 30
- (3) 4 : 30
- (4) 8 : 30

Options 1. 1

- 2. 2
- 3. 3
- 4. 4

Question Type : MCQ

Question ID : 4795483800

Option 1 ID : 47954815045

Option 2 ID : 47954815046

Option 3 ID : 47954815047

Option 4 ID : 47954815048

Status : Answered

Chosen Option : 2



Q.27 Given below are three statements numbered (I), (II) and (III) followed by a conclusion. Study the statements and the conclusion and point out which statements studied together will bring the conclusion.

- Statements :**
- (I) Price rise is natural phenomenon
 - (II) If production increases prices fall
 - (III) High prices affect the poor.

Conclusion : If production rises the poor felt relieved.

Choose the **correct** answer.

- (1) only (I) and (II)
- (2) only (I) and (III)
- (3) only (II) and (III)
- (4) (I), (II) and (III)

Options

- 1. 1
- 2. 2
- 3. 3
- 4. 4

Question Type : **MCQ**
Question ID : **4795483817**
Option 1 ID : **47954815113**
Option 2 ID : **47954815114**
Option 3 ID : **47954815115**
Option 4 ID : **47954815116**
Status : **Answered**
Chosen Option : **3**

Q.28 Given below are three statements numbered (i), (ii) and (iii) followed by four conclusions numbered (I), (II), (III) and (IV).

- Statements :**
- (i) Some buckets are salts.
 - (ii) All salts are ipods.
 - (iii) Some ipods are woods.

- Conclusions :**
- (I) Some woods are salt.
 - (II) Some buckets are woods
 - (III) Some ipods are buckets
 - (IV) Some woods are buckets

Identify which of the conclusions follows the given statements ?

- (1) only (I) follows
- (2) only (II) follows
- (3) only (III) follows
- (4) only (IV) follows

Options

- 1. 1
- 2. 2
- 3. 3
- 4. 4

Question Type : **MCQ**
Question ID : **4795483814**
Option 1 ID : **47954815101**
Option 2 ID : **47954815102**
Option 3 ID : **47954815103**
Option 4 ID : **47954815104**
Status : **Answered**
Chosen Option : **3**

Q.29 एक महिला कहती है, “यदि आप मेरी आयु के अंकों को उलट देते हैं तो वह संख्या मेरे पति आयु को प्रस्तुत करती है, वह वास्तव में मुझसे वरिष्ठ (बड़े) हैं और हम दोनों के उम्र (आयु) के मध्य का अंतर हम लोगों के उम्र के योग का $\frac{1}{11}$ वाँ है।” महिला की आयु कितनी है ?

- (1) 54 वर्ष
- (2) 45 वर्ष
- (3) 34 वर्ष
- (4) 43 वर्ष

Options 1. 1

- 2. 2
- 3. 3
- 4. 4

Question Type : MCQ

Question ID : 4795483826

Option 1 ID : 47954815149

Option 2 ID : 47954815150

Option 3 ID : 47954815151

Option 4 ID : 47954815152

Status : Answered

Chosen Option : 2

Q.30 If the seventh day of month is three days earlier than Friday, what day will it be on the nineteenth day of the month ?

- (1) Sunday
- (2) Monday
- (3) Friday
- (4) Thursday

Options 1. 1

- 2. 2
- 3. 3
- 4. 4

Question Type : MCQ

Question ID : 4795483804

Option 1 ID : 47954815061

Option 2 ID : 47954815062

Option 3 ID : 47954815063

Option 4 ID : 47954815064

Status : Answered

Chosen Option : 1

Section : General Knowledge/ General Awareness



Q.1 In Jharkhand, Pittha is a form of which one of the following ?

- (1) Food
- (2) Ornament
- (3) Dress
- (4) Festival

Options 1. 1

- 2. 2
- 3. 3
- 4. 4

Question Type : MCQ

Question ID : 4795483844

Option 1 ID : 47954815221

Option 2 ID : 47954815222

Option 3 ID : 47954815223

Option 4 ID : 47954815224

Status : Answered

Chosen Option : 1

Q.2 रासायनिक अभिक्रिया जिसमें उष्मा बाहर निकलता है, कहलाती है :

- (1) उष्माशोषी (इंडोथर्मिक)
- (2) उष्माक्षेपी (एक्सोथर्मिक)
- (3) उपचयन अभिक्रिया
- (4) अपचयन अभिक्रिया

Options 1. 1

- 2. 2
- 3. 3
- 4. 4

Question Type : MCQ

Question ID : 4795483854

Option 1 ID : 47954815261

Option 2 ID : 47954815262

Option 3 ID : 47954815263

Option 4 ID : 47954815264

Status : Answered

Chosen Option : 2



Q.3 From which one of the following is the percentage of reflected amount of radiation highest ?

- (1) Wet ground
- (2) Thick cloud
- (3) Forest
- (4) Snow cover

Options 1. 1

- 2. 2
- 3. 3
- 4. 4

Question Type : **MCQ**

Question ID : **4795483842**

Option 1 ID : **47954815213**

Option 2 ID : **47954815214**

Option 3 ID : **47954815215**

Option 4 ID : **47954815216**

Status : **Answered**

Chosen Option : **2**

Q.4 In respect of human nutrition, consider the following statements :

- (A) Milk is a source of phosphorus
- (B) Groundnuts provide iron
- (C) Folic acid can be obtained from sprouted pulses

Select the **correct** answer using the code given below :

- (1) (A), (B) and (C)
- (2) (B) only
- (3) (A) and (C) only
- (4) (B) and (C) only

Options 1. 1

- 2. 2
- 3. 3
- 4. 4

Question Type : **MCQ**

Question ID : **4795483831**

Option 1 ID : **47954815169**

Option 2 ID : **47954815170**

Option 3 ID : **47954815171**

Option 4 ID : **47954815172**

Status : **Not Answered**

Chosen Option : **--**

Q.5 What does 'Pabu' in Ladakh refer to ?

- (A) Shoes made of yak hair and skin
- (B) A full length coat worn by men

Choose the **correct** answer from the options given below :

- (1) (A) only
- (2) (B) only
- (3) (A) and (B) both
- (4) Neither (A) nor (B)

Options 1. 1
2. 2
3. 3
4. 4

Question Type : **MCQ**
Question ID : **4795483850**
Option 1 ID : **47954815245**
Option 2 ID : **47954815246**
Option 3 ID : **47954815247**
Option 4 ID : **47954815248**
Status : **Answered**
Chosen Option : **1**

Q.6 Gurjari, Todi, Bilaval and Sorathi from Gujarat are :

- (1) Food items
- (2) Ragas
- (3) Colours
- (4) Festivals

Options 1. 1
2. 2
3. 3
4. 4

Question Type : **MCQ**
Question ID : **4795483849**
Option 1 ID : **47954815241**
Option 2 ID : **47954815242**
Option 3 ID : **47954815243**
Option 4 ID : **47954815244**
Status : **Answered**
Chosen Option : **2**

Q.7 निम्नलिखित में से कौन महात्मा गांधी का अमरीकी जीवनी लेखक है ?

- (1) अर्नेस्ट हेमिंगवे
- (2) बॉबी फिशर
- (3) लुई फिशर
- (4) अन्थोनी जे परेल

Options 1. 1

2. 2

3. 3

4. 4

Question Type : MCQ

Question ID : 4795483852

Option 1 ID : 47954815253

Option 2 ID : 47954815254

Option 3 ID : 47954815255

Option 4 ID : 47954815256

Status : Answered

Chosen Option : 4

Q.8 When did India join the United Nations ?

- (1) August 1941
- (2) October 1945
- (3) August 1947
- (4) October 1950

Options 1. 1

2. 2

3. 3

4. 4

Question Type : MCQ

Question ID : 4795483851

Option 1 ID : 47954815249

Option 2 ID : 47954815250

Option 3 ID : 47954815251

Option 4 ID : 47954815252

Status : Answered

Chosen Option : 2



Q.9 Which among the following statements about Nuclear Non-Proliferation Treaty (NPT) is/are correct ?

- (A) NPT allows only the nuclear weapon States to have nuclear weapons and stops others from acquiring them.
- (B) According to NPT there are five nuclear weapon States : US, USSR, BRITAIN, FRANCE and CHINA.
- (C) NPT was entered into force on 8th March, 1975.
- (D) NPT was extended indefinitely in 1995.

Choose the **correct** answer from the options given below :

- (1) (A), (B), (C) and (D)
- (2) (A) and (B) only
- (3) (A), (B) and (D) only
- (4) (B), (C) and (D) only

Options 1. 1

2. 2

3. 3

4. 4

Question Type : **MCQ**

Question ID : **4795483832**

Option 1 ID : **47954815173**

Option 2 ID : **47954815174**

Option 3 ID : **47954815175**

Option 4 ID : **47954815176**

Status : **Not Answered**

Chosen Option : --

Q.10 On the basis of the Report of the States Reorganisation Commission, the States Reorganisation Act was passed in 1956, which led to the creation of which of the following ?

- (1) 9 States and 5 Union Territories
- (2) 11 States and 7 Union Territories
- (3) 14 States and 6 Union Territories
- (4) 21 States and 9 Union Territories

Options 1. 1

2. 2

3. 3

4. 4

Question Type : **MCQ**

Question ID : **4795483840**

Option 1 ID : **47954815205**

Option 2 ID : **47954815206**

Option 3 ID : **47954815207**

Option 4 ID : **47954815208**

Status : **Answered**

Chosen Option : **3**



Q.11 Who amongst the following won Arjuna Award 2022 for Para-swimming ?

- (1) Ms. Manasi Girishchandra Joshi
- (2) Ms. Deep Grace Ekka
- (3) Ms. Sreeja Akula
- (4) Shri Swapnil Sanjay Patil

Options 1. 1

- 2. 2
- 3. 3
- 4. 4

Question Type : **MCQ**

Question ID : **4795483847**

Option 1 ID : **47954815233**

Option 2 ID : **47954815234**

Option 3 ID : **47954815235**

Option 4 ID : **47954815236**

Status : **Answered**

Chosen Option : **4**

Q.12 Naharkatiya and Moran-Hugrijan, the important fields are located in which State of India ?

- (1) Rajasthan
- (2) Madhya Pradesh
- (3) Assam
- (4) West Bengal

Options 1. 1

- 2. 2
- 3. 3
- 4. 4

Question Type : **MCQ**

Question ID : **4795483856**

Option 1 ID : **47954815269**

Option 2 ID : **47954815270**

Option 3 ID : **47954815271**

Option 4 ID : **47954815272**

Status : **Not Answered**

Chosen Option : **--**

Q.13 Who among the following made an aggressive plea that Hindi be used as the language of the Constitution of India in one of the earliest Sessions of the Constituent Assembly ?

- (1) R.V. Dhulekar
- (2) Shrimati G. Durgabai
- (3) T.A. Ramalingam Chettiar
- (4) Rajendra Prasad

Options 1. 1

- 2. 2
- 3. 3
- 4. 4

Question Type : **MCQ**

Question ID : **4795483853**

Option 1 ID : **47954815257**

Option 2 ID : **47954815258**

Option 3 ID : **47954815259**

Option 4 ID : **47954815260**

Status : **Not Answered**

Chosen Option : **--**



Q.14 Who received the Nobel Prize 2022 for Literature ?

- (1) Louise Gluck
- (2) Annie Ernaux
- (3) Bob Dylan
- (4) Abdulrazak Gurnah

Options 1. 1
2. 2
3. 3
4. 4

Question Type : **MCQ**
Question ID : **4795483841**
Option 1 ID : **47954815209**
Option 2 ID : **47954815210**
Option 3 ID : **47954815211**
Option 4 ID : **47954815212**
Status : **Answered**
Chosen Option : **2**

Q.15 The specific areas where the earthquake waves are not reported is called :

- (1) Hypocentre
- (2) Shadow zone
- (3) Lithosphere
- (4) Mantle

Options 1. 1
2. 2
3. 3
4. 4

Question Type : **MCQ**
Question ID : **4795483858**
Option 1 ID : **47954815277**
Option 2 ID : **47954815278**
Option 3 ID : **47954815279**
Option 4 ID : **47954815280**
Status : **Not Answered**
Chosen Option : **--**

Q.16 The area of Punjab is divided into three regions. Identify those three regions from the following :

- (A) Majha
- (B) Doaba
- (C) Hola
- (D) Malwa

Choose the **correct** answer from the options given below :

- (1) (A), (B) and (D) only
- (2) (B), (C) and (D) only
- (3) (A), (B) and (C) only
- (4) (A), (C) and (D) only

Options 1. 1

2. 2

3. 3

4. 4

Question Type : **MCQ**

Question ID : **4795483845**

Option 1 ID : **47954815225**

Option 2 ID : **47954815226**

Option 3 ID : **47954815227**

Option 4 ID : **47954815228**

Status : **Answered**

Chosen Option : **3**

Q.17 Crops grown in summer season, i.e., from April to June, are called :

- (1) Kharif crops
- (2) Rabi crops
- (3) Cash crops
- (4) Zaid crops

Options 1. 1

2. 2

3. 3

4. 4

Question Type : **MCQ**

Question ID : **4795483848**

Option 1 ID : **47954815237**

Option 2 ID : **47954815238**

Option 3 ID : **47954815239**

Option 4 ID : **47954815240**

Status : **Not Answered**

Chosen Option : **--**

Q.18 Correctly match the organization (List I) with the location (List II).

(List I)	(List II)
Organization	Location
(A) NDA	(I) Nagpur
(B) IMA	(II) Hyderabad
(C) SVPNPA	(III) Khadakwasla
(D) NADT	(IV) Dehradun

Select the **correct** answer using the code given below :

- (1) (A)-(III), (B)-(I), (C)-(IV), (D)-(II)
- (2) (A)-(IV), (B)-(I), (C)-(II), (D)-(III)
- (3) (A)-(IV), (B)-(II), (C)-(III), (D)-(I)
- (4) (A)-(III), (B)-(IV), (C)-(II), (D)-(I)

Options 1. 1

2. 2

3. 3

4. 4

Question Type : MCQ

Question ID : 4795483837

Option 1 ID : 47954815193

Option 2 ID : 47954815194

Option 3 ID : 47954815195

Option 4 ID : 47954815196

Status : Answered

Chosen Option : 4

Q.19 Cells arise from pre-existing cells (*Omnis cellula e cellula*) was postulated by :

- (1) M.J. Schleiden
- (2) T. Schwann
- (3) R. Virchow
- (4) J.E. Purkinje

Options 1. 1

2. 2

3. 3

4. 4

Question Type : MCQ

Question ID : 4795483857

Option 1 ID : 47954815273

Option 2 ID : 47954815274

Option 3 ID : 47954815275

Option 4 ID : 47954815276

Status : Answered

Chosen Option : 4

Q.20 Who among the following received the Nobel Prize 2022 for Physiology or Medicine ?

- (1) Alain Aspect
- (2) Carolyn Bertozzi
- (3) Ales Byalyatski
- (4) Svante Paabo

Options 1. 1

- 2. 2
- 3. 3
- 4. 4

Question Type : **MCQ**
Question ID : **4795483843**
Option 1 ID : **47954815217**
Option 2 ID : **47954815218**
Option 3 ID : **47954815219**
Option 4 ID : **47954815220**
Status : **Answered**
Chosen Option : **4**

Q.21 Which one of the following is **NOT** correctly matched ?

Lakes

Countries

- (1) Balkhash : Kazakhstan
- (2) Victoria : Uganda, Kenya, Tanzania
- (3) Superior : China
- (4) Baikal : Russia

Options 1. 1

- 2. 2
- 3. 3
- 4. 4

Question Type : **MCQ**
Question ID : **4795483835**
Option 1 ID : **47954815185**
Option 2 ID : **47954815186**
Option 3 ID : **47954815187**
Option 4 ID : **47954815188**
Status : **Answered**
Chosen Option : **4**

Q.22 Who is the author of the book 'French Braid' ?

- (1) Anne Tyler
- (2) Elif Batuman
- (3) Jean Chen Ho
- (4) Charmaine Wilkerson

Options 1. 1

- 2. 2
- 3. 3
- 4. 4

Question Type : MCQ

Question ID : 4795483838

Option 1 ID : 47954815197

Option 2 ID : 47954815198

Option 3 ID : 47954815199

Option 4 ID : 47954815200

Status : Not Answered

Chosen Option : --

Q.23 List-I contains names of the dynasty and List-II contains the period over which they ruled Delhi Sultanate. Match List-I correctly with the items of List-II.

(List-I)	(List-II)
(A) Slave Dynasty	(I) 1321 - 1414
(B) Tuglaq Dynasty	(II) 1290 - 1320
(C) Lodi Dynasty	(III) 1206 - 1290
(D) Khilji Dynasty	(IV) 1451 - 1526

Select the correct answer from the codes given below :

- (1) (A)-(II), (B)-(IV), (C)-(III), (D)-(I)
- (2) (A)-(IV), (B)-(III), (C)-(II), (D)-(I)
- (3) (A)-(III), (B)-(I), (C)-(IV), (D)-(II)
- (4) (A)-(II), (B)-(III), (C)-(IV), (D)-(I)

Options 1. 1

- 2. 2
- 3. 3
- 4. 4

Question Type : MCQ

Question ID : 4795483855

Option 1 ID : 47954815265

Option 2 ID : 47954815266

Option 3 ID : 47954815267

Option 4 ID : 47954815268

Status : Answered

Chosen Option : 3

Q.24 Consider the following statements about Family Laws in India. Which statement is **NOT** correct ?

- (1) In the Lily Thomas case, the Supreme Court ruled that the second marriage of a Hindu Man without divorcing the first wife is void.
- (2) In the Shayara Bano case, the Supreme Court enunciated a set of guidelines for prevention of sexual harassment at workplace.
- (3) In the Nirbhaya case, the Criminal Law (Amendment) ordinance was introduced.
- (4) In the Vishakha case, new set of guidelines known as 'Vishakha Guidelines' were laid down to uphold the rights of working women.

Options 1. 1

2. 2
3. 3
4. 4

Question Type : **MCQ**

Question ID : **4795483839**

Option 1 ID : **47954815201**

Option 2 ID : **47954815202**

Option 3 ID : **47954815203**

Option 4 ID : **47954815204**

Status : **Not Answered**

Chosen Option : --

Q.25 निम्नलिखित में से कौन फली (लेग्यूम) का एक उदाहरण है ?

- (1) आंवला
- (2) मूंगफली
- (3) गेहूं
- (4) बैंगन

Options 1. 1

2. 2
3. 3
4. 4

Question Type : **MCQ**

Question ID : **4795483846**

Option 1 ID : **47954815229**

Option 2 ID : **47954815230**

Option 3 ID : **47954815231**

Option 4 ID : **47954815232**

Status : **Answered**

Chosen Option : **2**



Q.26 Who among the following national leaders undertook a fast unto death in October 1952, demanding a separate State of Andhra, which led to his death after 56 days in December 1952 ?

- (1) Tanguturi Prakasan
- (2) Petti Sriramulu
- (3) Swami Ramanand Tirtha
- (4) Pingali Venkayya

Options 1. 1

- 2. 2
- 3. 3
- 4. 4

Question Type : **MCQ**
Question ID : **4795483833**
Option 1 ID : **47954815177**
Option 2 ID : **47954815178**
Option 3 ID : **47954815179**
Option 4 ID : **47954815180**
Status : **Not Answered**
Chosen Option : --

Q.27 The practice of growing different crops in a pre-planned succession in the same field is called :

- (1) Crop rotation
- (2) Crop protection
- (3) Mixed cropping
- (4) Inter cropping

Options 1. 1

- 2. 2
- 3. 3
- 4. 4

Question Type : **MCQ**
Question ID : **4795483834**
Option 1 ID : **47954815181**
Option 2 ID : **47954815182**
Option 3 ID : **47954815183**
Option 4 ID : **47954815184**
Status : **Answered**
Chosen Option : **3**

Q.28 Which one among the following bodies administers the Atal Pension Yojana (APY), which covers workers in the unorganized section ?

- (1) National Pension Authority (NPA)
- (2) Pension Fund Regulatory and Development Authority (PFRDA)
- (3) Department of Pension and Savings (DPS)
- (4) Pension Guarantee Fund (PGF)

Options 1. 1

- 2. 2
- 3. 3
- 4. 4

Question Type : **MCQ**
Question ID : **4795483829**
Option 1 ID : **47954815161**
Option 2 ID : **47954815162**
Option 3 ID : **47954815163**
Option 4 ID : **47954815164**
Status : **Answered**
Chosen Option : **2**

Q.29 Match correctly the top professionals (**List I**) with their organization (**List II**).

(List I)	(List II)
Professional	Organization
(A) Sundar Pichai	(I) Vimeo
(B) Satya Nadella	(II) Palo Alto Networks
(C) Nikesh Arora	(III) Alphabet
(D) Anjali Sud	(IV) Microsoft

Select the **correct** answer using the code given below :

- (1) (A)-(II), (B)-(IV), (C)-(I), (D)-(III)
- (2) (A)-(II), (B)-(I), (C)-(III), (D)-(IV)
- (3) (A)-(III), (B)-(IV), (C)-(II), (D)-(I)
- (4) (A)-(III), (B)-(II), (C)-(IV), (D)-(I)

Options 1. 1

2. 2

3. 3

4. 4

Question Type : MCQ

Question ID : 4795483830

Option 1 ID : 47954815165

Option 2 ID : 47954815166

Option 3 ID : 47954815167

Option 4 ID : 47954815168

Status : Answered

Chosen Option : 3

Q.30 Organelle other than nucleus, containing DNA is :

- (1) Chloroplast
- (2) Golgi bodies
- (3) Ribosomes
- (4) Endoplasmic reticulum

Options 1. 1

2. 2

3. 3

4. 4

Question Type : MCQ

Question ID : 4795483836

Option 1 ID : 47954815189

Option 2 ID : 47954815190

Option 3 ID : 47954815191

Option 4 ID : 47954815192

Status : Answered

Chosen Option : 4

Section : Quantitative Ability

Q.1 Forty litre mixture of milk and water contains 10% water. How much water is to be added to the mixture, such that it contains 80% pure milk ?

- (1) 8 litre
- (2) 6 litre
- (3) 5 litre
- (4) 4 litre

Options 1. 1

- 2. 2
- 3. 3
- 4. 4

Question Type : **MCQ**

Question ID : **4795483860**

Option 1 ID : **47954815285**

Option 2 ID : **47954815286**

Option 3 ID : **47954815287**

Option 4 ID : **47954815288**

Status : **Answered**

Chosen Option : **3**

Q.2 The difference in the compound interests on ₹ 10,000 for $1\frac{1}{2}$ years at 10% per annum when compounded half yearly and when compounded yearly.

- (1) ₹ 21
- (2) ₹ 21.25
- (3) ₹ 24.75
- (4) ₹ 26.25

Options 1. 1

- 2. 2
- 3. 3
- 4. 4

Question Type : **MCQ**

Question ID : **4795483875**

Option 1 ID : **47954815345**

Option 2 ID : **47954815346**

Option 3 ID : **47954815347**

Option 4 ID : **47954815348**

Status : **Answered**

Chosen Option : **4**

Q.3 A rectangular piece of cloth was found to have lost 40% of its length and 20% of its breadth after a wash. The percentage of decrease in area is :

- (1) 58
- (2) 52
- (3) 30
- (4) 46

Options 1. 1

- 2. 2
- 3. 3
- 4. 4

Question Type : **MCQ**

Question ID : **4795483879**

Option 1 ID : **47954815361**

Option 2 ID : **47954815362**

Option 3 ID : **47954815363**

Option 4 ID : **47954815364**

Status : **Answered**

Chosen Option : **2**



Q.4 A sum of money doubles itself after 15 years at compound interest. In how many years will it become eight times ?

- (1) 42 years
- (2) 44 years
- (3) 46 years
- (4) 45 years

Options 1. 1

- 2. 2
- 3. 3
- 4. 4

Question Type : **MCQ**

Question ID : **4795483876**

Option 1 ID : **47954815349**

Option 2 ID : **47954815350**

Option 3 ID : **47954815351**

Option 4 ID : **47954815352**

Status : **Answered**

Chosen Option : **4**

Q.5 The sum of three numbers is 112. If the ratio of the first to the second is 2 : 3 and that of the second to the third is 4 : 5, then the third number, is :

- (1) 38
- (2) 40
- (3) 48
- (4) 52

Options 1. 1

- 2. 2
- 3. 3
- 4. 4

Question Type : **MCQ**

Question ID : **4795483863**

Option 1 ID : **47954815297**

Option 2 ID : **47954815298**

Option 3 ID : **47954815299**

Option 4 ID : **47954815300**

Status : **Answered**

Chosen Option : **3**

Q.6 A boat whose speed in still water is 15 km/h can cover 36 km downstream and 36 km upstream in 5 hours. The speed of the stream (in km/h) will be :

- (1) 1
- (2) 2
- (3) 3
- (4) 4

Options 1. 1

- 2. 2
- 3. 3
- 4. 4

Question Type : **MCQ**

Question ID : **4795483861**

Option 1 ID : **47954815289**

Option 2 ID : **47954815290**

Option 3 ID : **47954815291**

Option 4 ID : **47954815292**

Status : **Answered**

Chosen Option : **3**

Q.7

The value of $(0.2)^2 + (0.02)^2$:

- (1) 0.0404
- (2) 0.044
- (3) 0.404
- (4) 0.0444

Options 1. 1

- 2. 2
- 3. 3
- 4. 4

Question Type : MCQ

Question ID : 4795483865

Option 1 ID : 47954815305

Option 2 ID : 47954815306

Option 3 ID : 47954815307

Option 4 ID : 47954815308

Status : Answered

Chosen Option : 1

Q.8

A person reaches his destination 30 minutes late if he travels with a speed of 15 km/h, and reaches 6 minutes before time if his speed is 18 km/h. What is the distance (in km) of his destination from his starting point ?

- (1) 63
- (2) 60
- (3) 56
- (4) 54

Options 1. 1

- 2. 2
- 3. 3
- 4. 4

Question Type : MCQ

Question ID : 4795483862

Option 1 ID : 47954815293

Option 2 ID : 47954815294

Option 3 ID : 47954815295

Option 4 ID : 47954815296

Status : Answered

Chosen Option : 4

Q.9 Two numbers, both greater than 29, have H.C.F. and L.C.M. 29 and 4147. Then the difference of numbers is divisible by :

- (1) 5
- (2) 3
- (3) 2
- (4) 7

Options 1. 1

- 2. 2
- 3. 3
- 4. 4

Question Type : **MCQ**

Question ID : **4795483886**

Option 1 ID : **47954815389**

Option 2 ID : **47954815390**

Option 3 ID : **47954815391**

Option 4 ID : **47954815392**

Status : **Answered**

Chosen Option : **3**

Q.10 A sum becomes ₹ 2286 in 3 years and ₹ 2448 in 4 years at simple interest. What is the rate (in percentage) of interest per annum ?

- (1) 9
- (2) 8
- (3) 6
- (4) 12

Options 1. 1

- 2. 2
- 3. 3
- 4. 4

Question Type : **MCQ**

Question ID : **4795483866**

Option 1 ID : **47954815309**

Option 2 ID : **47954815310**

Option 3 ID : **47954815311**

Option 4 ID : **47954815312**

Status : **Answered**

Chosen Option : **1**



Q.11 Arrangement of $\sqrt[3]{5}$, $\sqrt{2}$ and $\sqrt[4]{6}$ in ascending order is :

(1) $\sqrt[3]{5}, \sqrt[4]{6}, \sqrt{2}$

(2) $\sqrt{2}, \sqrt[3]{5}, \sqrt[4]{6}$

(3) $\sqrt{2}, \sqrt[4]{6}, \sqrt[3]{5}$

(4) $\sqrt[4]{6}, \sqrt[3]{5}, \sqrt{2}$

Options 1. 1

2. 2

3. 3

4. 4

Question Type : MCQ

Question ID : 4795483874

Option 1 ID : 47954815341

Option 2 ID : 47954815342

Option 3 ID : 47954815343

Option 4 ID : 47954815344

Status : Answered

Chosen Option : 1

Q.12 At what rate percent per annum of compound interest will ₹ 1600 amount to ₹ 1852.20 in 3 years ?

(1) 2

(2) 3

(3) 6

(4) 5

Options 1. 1

2. 2

3. 3

4. 4

Question Type : MCQ

Question ID : 4795483867

Option 1 ID : 47954815313

Option 2 ID : 47954815314

Option 3 ID : 47954815315

Option 4 ID : 47954815316

Status : Answered

Chosen Option : 4



Q.13 Let 16 men can finish a piece of work in 49 days. 14 men start working and in 8 days they finished some amount of work. If 14 more men be added to the existing work force, then how many more days it will take to complete the work ?

- (1) 18
- (2) 20
- (3) 22
- (4) 24

Options 1. 1

- 2. 2
- 3. 3
- 4. 4

Question Type : **MCQ**

Question ID : **4795483883**

Option 1 ID : **47954815377**

Option 2 ID : **47954815378**

Option 3 ID : **47954815379**

Option 4 ID : **47954815380**

Status : **Answered**

Chosen Option : **4**

Q.14 Vinay invested money in his two companies in the ratio 4 : 5. At the end of the year, he earns 25% profit in first company and 60% loss in second company. What is his total loss % ?

- (1) $13\frac{1}{3}$
- (2) $22\frac{2}{9}$
- (3) $15\frac{1}{2}$
- (4) 32

Options 1. 1

- 2. 2
- 3. 3
- 4. 4

Question Type : **MCQ**

Question ID : **4795483870**

Option 1 ID : **47954815325**

Option 2 ID : **47954815326**

Option 3 ID : **47954815327**

Option 4 ID : **47954815328**

Status : **Answered**

Chosen Option : **2**

Q.15

If $(3^x - 2)^3 = 1$, then value of x is :

- (1) 1
- (2) 2
- (3) 0
- (4) 3

Options 1. 1

- 2. 2
- 3. 3
- 4. 4

Question Type : MCQ

Question ID : 4795483864

Option 1 ID : 47954815301

Option 2 ID : 47954815302

Option 3 ID : 47954815303

Option 4 ID : 47954815304

Status : Answered

Chosen Option : 2

Q.16

The least number which must be added to 580 to get a perfect square is :

- (1) 14
- (2) 45
- (3) 25
- (4) 40

Options 1. 1

- 2. 2
- 3. 3
- 4. 4

Question Type : MCQ

Question ID : 4795483888

Option 1 ID : 47954815397

Option 2 ID : 47954815398

Option 3 ID : 47954815399

Option 4 ID : 47954815400

Status : Answered

Chosen Option : 2



Q.17 एक शर्ट जिसका क्रय मूल्य ₹ 50 है, 10% लाभ पर अंकित की जाती है। अंकित मूल्य पर 10% बढ़ा देने के पश्चात शर्ट का विक्रय मूल्य (₹ में) ज्ञात कीजिए।

- (1) 46.25
- (2) 49.50
- (3) 48.36
- (4) 39.50

Options 1. 1

- 2. 2
- 3. 3
- 4. 4

Question Type : **MCQ**

Question ID : **4795483873**

Option 1 ID : **47954815337**

Option 2 ID : **47954815338**

Option 3 ID : **47954815339**

Option 4 ID : **47954815340**

Status : **Answered**

Chosen Option : **2**

Q.18 The price of cylinder of cooking gas has increased by 25%. The percentage of reduction that a family should effect in the use of cooking gas so as not to increase the expenditure on this account is :

- (1) 25%
- (2) 15%
- (3) 40%
- (4) 20%

Options 1. 1

- 2. 2
- 3. 3
- 4. 4

Question Type : **MCQ**

Question ID : **4795483880**

Option 1 ID : **47954815365**

Option 2 ID : **47954815366**

Option 3 ID : **47954815367**

Option 4 ID : **47954815368**

Status : **Answered**

Chosen Option : **4**



Q.19

The average of all prime numbers between 30 and 50 is $10a + b + \frac{c}{10}$ then $a + b + c$ is :

- (1) 23
- (2) 22
- (3) 20
- (4) 21

Options 1. 1

- 2. 2
- 3. 3
- 4. 4

Question Type : **MCQ**

Question ID : **4795483887**

Option 1 ID : **47954815393**

Option 2 ID : **47954815394**

Option 3 ID : **47954815395**

Option 4 ID : **47954815396**

Status : **Answered**

Chosen Option : **1**

Q.20

The average of 10 numbers is 51. If the average of the first 6 numbers is 49 and those of the last 6 numbers is 55, then what is the average of the 5th and the 6th numbers ?

- (1) 52
- (2) 55
- (3) 56
- (4) 57

Options 1. 1

- 2. 2
- 3. 3
- 4. 4

Question Type : **MCQ**

Question ID : **4795483859**

Option 1 ID : **47954815281**

Option 2 ID : **47954815282**

Option 3 ID : **47954815283**

Option 4 ID : **47954815284**

Status : **Answered**

Chosen Option : **4**

Q.21

A man invests ₹ 5000 for 2 years at 5% p.a. compounded yearly. But income tax at the rate of 20% on the interest earned is deducted at the end of each year. The amount after second year will be :

- (1) ₹ 5410
- (2) ₹ 5408
- (3) ₹ 5200
- (4) ₹ 5260

Options 1. 1

- 2. 2
- 3. 3
- 4. 4

Question Type : **MCQ**

Question ID : **4795483872**

Option 1 ID : **47954815333**

Option 2 ID : **47954815334**

Option 3 ID : **47954815335**

Option 4 ID : **47954815336**

Status : **Answered**

Chosen Option : **2**



Q.22 The dimensions of a rectangle when increased by 4 meters, are in the ratio 4 : 3 and when decreased by 4 meters are in the ratio 2 : 1. Then the product of the dimensions of the rectangle is :

- (1) 86
- (2) 92
- (3) 84
- (4) 96

Options 1. 1

- 2. 2
- 3. 3
- 4. 4

Question Type : **MCQ**

Question ID : **4795483877**

Option 1 ID : **47954815353**

Option 2 ID : **47954815354**

Option 3 ID : **47954815355**

Option 4 ID : **47954815356**

Status : **Answered**

Chosen Option : **4**

Q.23 What should be subtracted from each of the numbers 8, 23, 11, 35 so that the resulting numbers are in proportion ?

- (1) 4
- (2) 3
- (3) 2
- (4) 1

Options 1. 1

- 2. 2
- 3. 3
- 4. 4

Question Type : **MCQ**

Question ID : **4795483885**

Option 1 ID : **47954815385**

Option 2 ID : **47954815386**

Option 3 ID : **47954815387**

Option 4 ID : **47954815388**

Status : **Answered**

Chosen Option : **2**

Q.24 After getting two successive discount, a shirt with a list price of ₹ 150 is available at ₹ 105. If the second discount is 12.5% find the first discount.

- (1) 15%
- (2) 20%
- (3) 30%
- (4) 25%

Options 1. 1

- 2. 2
- 3. 3
- 4. 4

Question Type : **MCQ**

Question ID : **4795483882**

Option 1 ID : **47954815373**

Option 2 ID : **47954815374**

Option 3 ID : **47954815375**

Option 4 ID : **47954815376**

Status : **Answered**

Chosen Option : **2**



Q.25 The profit earned by a dealer by selling an item at ₹ 3850 is equal to the loss on selling the same item at ₹ 3150. What will be the profit (in percentages) if the same item is sold for ₹ 4200 ?

- (1) 10%
- (2) 20%
- (3) 30%
- (4) 40%

Options 1. 1

- 2. 2
- 3. 3
- 4. 4

Question Type : **MCQ**

Question ID : **4795483869**

Option 1 ID : **47954815321**

Option 2 ID : **47954815322**

Option 3 ID : **47954815323**

Option 4 ID : **47954815324**

Status : **Answered**

Chosen Option : **2**

Q.26 A can finish a work in 27 days. Also he is 100% more efficient than B. In how many days, they both together finish the same work ?

- (1) 9
- (2) 18
- (3) 15
- (4) 20

Options 1. 1

- 2. 2
- 3. 3
- 4. 4

Question Type : **MCQ**

Question ID : **4795483881**

Option 1 ID : **47954815369**

Option 2 ID : **47954815370**

Option 3 ID : **47954815371**

Option 4 ID : **47954815372**

Status : **Answered**

Chosen Option : **2**

Q.27 Cost of fencing a circular plot at the rate of ₹ 16 per meter is ₹ 3520. What will be the area of the plot ?

- (1) 4250 m²
- (2) 2220 m²
- (3) 3850 m²
- (4) 3500 m²

Options 1. 1

- 2. 2
- 3. 3
- 4. 4

Question Type : **MCQ**

Question ID : **4795483878**

Option 1 ID : **47954815357**

Option 2 ID : **47954815358**

Option 3 ID : **47954815359**

Option 4 ID : **47954815360**

Status : **Answered**

Chosen Option : **3**



Q.28 The smallest number of 4 digits which is a perfect square is :

- (1) 1000
- (2) 1004
- (3) 1016
- (4) 1024

Options 1. 1

- 2. 2
- 3. 3
- 4. 4

Question Type : **MCQ**

Question ID : **4795483868**

Option 1 ID : **47954815317**

Option 2 ID : **47954815318**

Option 3 ID : **47954815319**

Option 4 ID : **47954815320**

Status : **Answered**

Chosen Option : **4**

Q.29 The least number which is a perfect square and is divisible by 20, 28, 32, 35 is :

- (1) 84100
- (2) 78400
- (3) 57600
- (4) 22500

Options 1. 1

- 2. 2
- 3. 3
- 4. 4

Question Type : **MCQ**

Question ID : **4795483884**

Option 1 ID : **47954815381**

Option 2 ID : **47954815382**

Option 3 ID : **47954815383**

Option 4 ID : **47954815384**

Status : **Answered**

Chosen Option : **2**

Q.30 एक व्यक्ति के पास फ्रिज खरीदने के लिए दो प्रस्ताव हैं। ₹ 10,000 नकद या 8 महीने बाद 18% की दर से ₹ 11760 का भुगतान। उसने उधार पर दूसरा प्रस्ताव स्वीकार किया। इस प्रकार उसे कितना धन (₹ में) अधिक देना पड़ा ?

- (1) 300
- (2) 400
- (3) 500
- (4) 600

Options 1. 1

2. 2

3. 3

4. 4

Question Type : **MCQ**

Question ID : **4795483871**

Option 1 ID : **47954815329**

Option 2 ID : **47954815330**

Option 3 ID : **47954815331**

Option 4 ID : **47954815332**

Status : **Not Answered**

Chosen Option : --

Section : **General English with Comprehension**



Comprehension:

Read the given passage carefully and answer the question that follow :

Vanilla is the second most expensive spice in the world, after saffron, a result of its long and labour intensive cultivation. Part of the orchid family, vanilla beans are hand-pollinated on family farms. Each flower opens for only one part of a day during the season; if it is not pollinated on that day, no pod is produced.

Once picked, the curing process, which involves drying the beans in the sun by day and allowing them to sweat in a box at night takes three to six months. The main producers of food grade vanilla, known as black vanilla because of the colour of the dried pods, are Madagascar, followed by Mexico and Tahiti. Vanilla from each country has its own distinctive characteristics but it is Madagascar vanilla that produces the creamy, sweet flavour beloved across the world.

One can get vanilla extract all over the world but Madagascar vanilla is chosen because it has the greatest depth of flavour. There are three main commercial preparations of whole beans, powder and extract. Extract is sold by the 'fold' - a unit that denotes the weight of vanilla beans per gallon. Silver Spoon, which distributes the American Nielsen-Massey vanilla brand in the U.K., explains that the market price of vanilla has risen in recent times. This has been driven largely by a poor quality harvest in Madagascar. Soaring prices will hurt companies that use the ingredient in everything from soft drinks to cakes and perfumes. But the pain will be felt most acutely by ice-cream makers, as it is the most expensive ingredient in the production process and some will be forced to pass on the increased cost to consumers.

When prices are high, market experts say, farmers are tempted to pick beans early. That leads to a less intense flavour, compounding problems in the market. The high-value crop is also a target for criminals. There are reports that vanilla farmers in Madagascar harvested their 2015 crop prematurely, for fear of losing their production to thieves.

This, coupled with inadequate drying in order to increase profits from their crop has led to lower quality vanilla. The combination of high prices and poor quality means some manufacturers are turning to synthetic alternatives. But many food brands are not open to using artificial flavouring.

Vanilla is every ice-cream company's biggest-selling product. You can bring out a niche flavour but vanilla will still be on top.

SubQuestion No : 1

Q.1 Which of the following statements is correct ?

- (1) Vanilla is a result of aggressively unintensive cultivation of the orchid family
- (2) Vanilla flowers need to be pollinated in one part of the day when it opens; only then is the pod produced
- (3) Black vanilla is a low quality vanilla
- (4) Madagascar vanilla is known for its creamy, sour flavour loved by the world

- Options**
- 1. 1
 - 2. 2
 - 3. 3
 - 4. 4

Question Type : **MCQ**
Question ID : **4795483898**
Option 1 ID : **47954815433**
Option 2 ID : **47954815434**
Option 3 ID : **47954815435**
Option 4 ID : **47954815436**
Status : **Answered**
Chosen Option : **4**

Comprehension:

Read the given passage carefully and answer the question that follow :

Vanilla is the second most expensive spice in the world, after saffron, a result of its long and labour intensive cultivation. Part of the orchid family, vanilla beans are hand-pollinated on family farms. Each flower opens for only one part of a day during the season; if it is not pollinated on that day, no pod is produced.

Once picked, the curing process, which involves drying the beans in the sun by day and allowing them to sweat in a box at night takes three to six months. The main producers of food grade vanilla, known as black vanilla because of the colour of the dried pods, are Madagascar, followed by Mexico and Tahiti. Vanilla from each country has its own distinctive characteristics but it is Madagascar vanilla that produces the creamy, sweet flavour beloved across the world.

One can get vanilla extract all over the world but Madagascar vanilla is chosen because it has the greatest depth of flavour. There are three main commercial preparations of whole beans, powder and extract. Extract is sold by the 'fold' - a unit that denotes the weight of vanilla beans per gallon. Silver Spoon, which distributes the American Nielsen-Massey vanilla brand in the U.K., explains that the market price of vanilla has risen in recent times. This has been driven largely by a poor quality harvest in Madagascar. Soaring prices will hurt companies that use the ingredient in everything from soft drinks to cakes and perfumes. But the pain will be felt most acutely by ice-cream makers, as it is the most expensive ingredient in the production process and some will be forced to pass on the increased cost to consumers.

When prices are high, market experts say, farmers are tempted to pick beans early. That leads to a less intense flavour, compounding problems in the market. The high-value crop is also a target for criminals. There are reports that vanilla farmers in Madagascar harvested their 2015 crop prematurely, for fear of losing their production to thieves.

This, coupled with inadequate drying in order to increase profits from their crop has led to lower quality vanilla. The combination of high prices and poor quality means some manufacturers are turning to synthetic alternatives. But many food brands are not open to using artificial flavouring.

Vanilla is every ice-cream company's biggest-selling product. You can bring out a niche flavour but vanilla will still be on top.

SubQuestion No : 2

Q.2 Choose the word from the passage that is similar in meaning to the phrase.

'component/constituent in the making of something'

- (1) commercial
- (2) coupled
- (3) ingredient
- (4) product

Options 1. 1

2. 2

3. 3

4. 4

Question Type : MCQ

Question ID : 4795483899

Option 1 ID : 47954815437

Option 2 ID : 47954815438

Option 3 ID : 47954815439

Option 4 ID : 47954815440

Status : Answered

Chosen Option : 3



Comprehension:

Read the given passage carefully and answer the question that follow :

Vanilla is the second most expensive spice in the world, after saffron, a result of its long and labour intensive cultivation. Part of the orchid family, vanilla beans are hand-pollinated on family farms. Each flower opens for only one part of a day during the season; if it is not pollinated on that day, no pod is produced.

Once picked, the curing process, which involves drying the beans in the sun by day and allowing them to sweat in a box at night takes three to six months. The main producers of food grade vanilla, known as black vanilla because of the colour of the dried pods, are Madagascar, followed by Mexico and Tahiti. Vanilla from each country has its own distinctive characteristics but it is Madagascar vanilla that produces the creamy, sweet flavour beloved across the world.

One can get vanilla extract all over the world but Madagascar vanilla is chosen because it has the greatest depth of flavour. There are three main commercial preparations of whole beans, powder and extract. Extract is sold by the 'fold' - a unit that denotes the weight of vanilla beans per gallon. Silver Spoon, which distributes the American Nielsen-Massey vanilla brand in the U.K., explains that the market price of vanilla has risen in recent times. This has been driven largely by a poor quality harvest in Madagascar. Soaring prices will hurt companies that use the ingredient in everything from soft drinks to cakes and perfumes. But the pain will be felt most acutely by ice-cream makers, as it is the most expensive ingredient in the production process and some will be forced to pass on the increased cost to consumers.

When prices are high, market experts say, farmers are tempted to pick beans early. That leads to a less intense flavour, compounding problems in the market. The high-value crop is also a target for criminals. There are reports that vanilla farmers in Madagascar harvested their 2015 crop prematurely, for fear of losing their production to thieves.

This, coupled with inadequate drying in order to increase profits from their crop has led to lower quality vanilla. The combination of high prices and poor quality means some manufacturers are turning to synthetic alternatives. But many food brands are not open to using artificial flavouring.

Vanilla is every ice-cream company's biggest-selling product. You can bring out a niche flavour but vanilla will still be on top.

SubQuestion No : 3

Q.3 Which of the following is not required for the production of pod ?

- (1) Hand-pollination
- (2) Opening of the flower
- (3) Sweating the bean in the sun
- (4) Curing process

Options 1. 1

2. 2

3. 3

4. 4

Question Type : **MCQ**

Question ID : **4795483893**

Option 1 ID : **47954815413**

Option 2 ID : **47954815414**

Option 3 ID : **47954815415**

Option 4 ID : **47954815416**

Status : **Not Answered**

Chosen Option : --



Comprehension:

Read the given passage carefully and answer the question that follow :

Vanilla is the second most expensive spice in the world, after saffron, a result of its long and labour intensive cultivation. Part of the orchid family, vanilla beans are hand-pollinated on family farms. Each flower opens for only one part of a day during the season; if it is not pollinated on that day, no pod is produced.

Once picked, the curing process, which involves drying the beans in the sun by day and allowing them to sweat in a box at night takes three to six months. The main producers of food grade vanilla, known as black vanilla because of the colour of the dried pods, are Madagascar, followed by Mexico and Tahiti. Vanilla from each country has its own distinctive characteristics but it is Madagascar vanilla that produces the creamy, sweet flavour beloved across the world.

One can get vanilla extract all over the world but Madagascar vanilla is chosen because it has the greatest depth of flavour. There are three main commercial preparations of whole beans, powder and extract. Extract is sold by the 'fold' - a unit that denotes the weight of vanilla beans per gallon. Silver Spoon, which distributes the American Nielsen-Massey vanilla brand in the U.K., explains that the market price of vanilla has risen in recent times. This has been driven largely by a poor quality harvest in Madagascar. Soaring prices will hurt companies that use the ingredient in everything from soft drinks to cakes and perfumes. But the pain will be felt most acutely by ice-cream makers, as it is the most expensive ingredient in the production process and some will be forced to pass on the increased cost to consumers.

When prices are high, market experts say, farmers are tempted to pick beans early. That leads to a less intense flavour, compounding problems in the market. The high-value crop is also a target for criminals. There are reports that vanilla farmers in Madagascar harvested their 2015 crop prematurely, for fear of losing their production to thieves.

This, coupled with inadequate drying in order to increase profits from their crop has led to lower quality vanilla. The combination of high prices and poor quality means some manufacturers are turning to synthetic alternatives. But many food brands are not open to using artificial flavouring.

Vanilla is every ice-cream company's biggest-selling product. You can bring out a niche flavour but vanilla will still be on top.

SubQuestion No : 4

Q.4 The choice of synthetic alternative to vanilla is made on account of :

- (1) Non-availability of vanilla
- (2) High yield of vanilla
- (3) Poor quality and high prices of vanilla
- (4) Vanilla stolen by thieves

Options 1. 1

2. 2

3. 3

4. 4

Question Type : MCQ

Question ID : 4795483892

Option 1 ID : 47954815409

Option 2 ID : 47954815410

Option 3 ID : 47954815411

Option 4 ID : 47954815412

Status : Answered

Chosen Option : 3



Comprehension:

Read the given passage carefully and answer the question that follow :

Vanilla is the second most expensive spice in the world, after saffron, a result of its long and labour intensive cultivation. Part of the orchid family, vanilla beans are hand-pollinated on family farms. Each flower opens for only one part of a day during the season; if it is not pollinated on that day, no pod is produced.

Once picked, the curing process, which involves drying the beans in the sun by day and allowing them to sweat in a box at night takes three to six months. The main producers of food grade vanilla, known as black vanilla because of the colour of the dried pods, are Madagascar, followed by Mexico and Tahiti. Vanilla from each country has its own distinctive characteristics but it is Madagascan vanilla that produces the creamy, sweet flavour beloved across the world.

One can get vanilla extract all over the world but Madagascan vanilla is chosen because it has the greatest depth of flavour. There are three main commercial preparations of whole beans, powder and extract. Extract is sold by the 'fold'- a unit that denotes the weight of vanilla beans per gallon. Silver Spoon, which distributes the American Nielsen-Massey vanilla brand in the U.K., explains that the market price of vanilla has risen in recent times. This has been driven largely by a poor quality harvest in Madagascar. Soaring prices will hurt companies that use the ingredient in everything from soft drinks to cakes and perfumes. But the pain will be felt most acutely by ice-cream makers, as it is the most expensive ingredient in the production process and some will be forced to pass on the increased cost to consumers.

When prices are high, market experts say, farmers are tempted to pick beans early. That leads to a less intense flavour, compounding problems in the market. The high-value crop is also a target for criminals. There are reports that vanilla farmers in Madagascar harvested their 2015 crop prematurely, for fear of losing their production to thieves.

This, coupled with inadequate drying in order to increase profits from their crop has led to lower quality vanilla. The combination of high prices and poor quality means some manufacturers are turning to synthetic alternatives. But many food brands are not open to using artificial flavouring.

Vanilla is every ice-cream company's biggest-selling product. You can bring out a niche flavour but vanilla will still be on top.

SubQuestion No : 5

Q.5 The word 'coupled' in the passage would mean :

- (1) Conjugated
- (2) Separated
- (3) Doubled
- (4) Twice

Options 1. 1

2. 2

3. 3

4. 4



Question Type : MCQ

Question ID : 4795483894

Option 1 ID : 47954815417

Option 2 ID : 47954815418

Option 3 ID : 47954815419

Option 4 ID : 47954815420

Status : Answered

Chosen Option : 3

Comprehension:

Read the given passage carefully and answer the question that follow :

Vanilla is the second most expensive spice in the world, after saffron, a result of its long and labour intensive cultivation. Part of the orchid family, vanilla beans are hand-pollinated on family farms. Each flower opens for only one part of a day during the season; if it is not pollinated on that day, no pod is produced.

Once picked, the curing process, which involves drying the beans in the sun by day and allowing them to sweat in a box at night takes three to six months. The main producers of food grade vanilla, known as black vanilla because of the colour of the dried pods, are Madagascar, followed by Mexico and Tahiti. Vanilla from each country has its own distinctive characteristics but it is Madagascan vanilla that produces the creamy, sweet flavour beloved across the world.

One can get vanilla extract all over the world but Madagascan vanilla is chosen because it has the greatest depth of flavour. There are three main commercial preparations of whole beans, powder and extract. Extract is sold by the 'fold'- a unit that denotes the weight of vanilla beans per gallon. Silver Spoon, which distributes the American Nielsen-Massey vanilla brand in the U.K., explains that the market price of vanilla has risen in recent times. This has been driven largely by a poor quality harvest in Madagascar. Soaring prices will hurt companies that use the ingredient in everything from soft drinks to cakes and perfumes. But the pain will be felt most acutely by ice-cream makers, as it is the most expensive ingredient in the production process and some will be forced to pass on the increased cost to consumers.

When prices are high, market experts say, farmers are tempted to pick beans early. That leads to a less intense flavour, compounding problems in the market. The high-value crop is also a target for criminals. There are reports that vanilla farmers in Madagascar harvested their 2015 crop prematurely, for fear of losing their production to thieves.

This, coupled with inadequate drying in order to increase profits from their crop has led to lower quality vanilla. The combination of high prices and poor quality means some manufacturers are turning to synthetic alternatives. But many food brands are not open to using artificial flavouring.

Vanilla is every ice-cream company's biggest-selling product. You can bring out a niche flavour but vanilla will still be on top.

SubQuestion No : 6

Q.6

The rise of the market price for vanilla is due to :

- (1) poor quality harvest in Madagascar
- (2) hand-pollination could not be done
- (3) thieves
- (4) early picking of beans

Options 1. 1

2. 2

3. 3

4. 4



Question Type : MCQ

Question ID : 4795483895

Option 1 ID : 47954815421

Option 2 ID : 47954815422

Option 3 ID : 47954815423

Option 4 ID : 47954815424

Status : Answered

Chosen Option : 4

Comprehension:

Read the given passage carefully and answer the question that follow :

Vanilla is the second most expensive spice in the world, after saffron, a result of its long and labour intensive cultivation. Part of the orchid family, vanilla beans are hand-pollinated on family farms. Each flower opens for only one part of a day during the season; if it is not pollinated on that day, no pod is produced.

Once picked, the curing process, which involves drying the beans in the sun by day and allowing them to sweat in a box at night takes three to six months. The main producers of food grade vanilla, known as black vanilla because of the colour of the dried pods, are Madagascar, followed by Mexico and Tahiti. Vanilla from each country has its own distinctive characteristics but it is Madagascar vanilla that produces the creamy, sweet flavour beloved across the world.

One can get vanilla extract all over the world but Madagascar vanilla is chosen because it has the greatest depth of flavour. There are three main commercial preparations of whole beans, powder and extract. Extract is sold by the 'fold' - a unit that denotes the weight of vanilla beans per gallon. Silver Spoon, which distributes the American Nielsen-Massey vanilla brand in the U.K., explains that the market price of vanilla has risen in recent times. This has been driven largely by a poor quality harvest in Madagascar. Soaring prices will hurt companies that use the ingredient in everything from soft drinks to cakes and perfumes. But the pain will be felt most acutely by ice-cream makers, as it is the most expensive ingredient in the production process and some will be forced to pass on the increased cost to consumers.

When prices are high, market experts say, farmers are tempted to pick beans early. That leads to a less intense flavour, compounding problems in the market. The high-value crop is also a target for criminals. There are reports that vanilla farmers in Madagascar harvested their 2015 crop prematurely, for fear of losing their production to thieves.

This, coupled with inadequate drying in order to increase profits from their crop has led to lower quality vanilla. The combination of high prices and poor quality means some manufacturers are turning to synthetic alternatives. But many food brands are not open to using artificial flavouring.

Vanilla is every ice-cream company's biggest-selling product. You can bring out a niche flavour but vanilla will still be on top.

SubQuestion No : 7

Q.7 Which of the given options best explains the expression "labour-intensive" cultivation ?

- (1) Machine-based cultivation
- (2) Automated cultivation
- (3) Manual cultivation
- (4) Urban Organic cultivation

Options 1. 1

2. 2

3. 3

4. 4

Question Type : **MCQ**

Question ID : **4795483890**

Option 1 ID : **47954815401**

Option 2 ID : **47954815402**

Option 3 ID : **47954815403**

Option 4 ID : **47954815404**

Status : **Answered**

Chosen Option : **3**



Comprehension:

Read the given passage carefully and answer the question that follow :

Vanilla is the second most expensive spice in the world, after saffron, a result of its long and labour intensive cultivation. Part of the orchid family, vanilla beans are hand-pollinated on family farms. Each flower opens for only one part of a day during the season; if it is not pollinated on that day, no pod is produced.

Once picked, the curing process, which involves drying the beans in the sun by day and allowing them to sweat in a box at night takes three to six months. The main producers of food grade vanilla, known as black vanilla because of the colour of the dried pods, are Madagascar, followed by Mexico and Tahiti. Vanilla from each country has its own distinctive characteristics but it is Madagascan vanilla that produces the creamy, sweet flavour beloved across the world.

One can get vanilla extract all over the world but Madagascan vanilla is chosen because it has the greatest depth of flavour. There are three main commercial preparations of whole beans, powder and extract. Extract is sold by the 'fold'- a unit that denotes the weight of vanilla beans per gallon. Silver Spoon, which distributes the American Nielsen-Massey vanilla brand in the U.K., explains that the market price of vanilla has risen in recent times. This has been driven largely by a poor quality harvest in Madagascar. Soaring prices will hurt companies that use the ingredient in everything from soft drinks to cakes and perfumes. But the pain will be felt most acutely by ice-cream makers, as it is the most expensive ingredient in the production process and some will be forced to pass on the increased cost to consumers.

When prices are high, market experts say, farmers are tempted to pick beans early. That leads to a less intense flavour, compounding problems in the market. The high-value crop is also a target for criminals. There are reports that vanilla farmers in Madagascar harvested their 2015 crop prematurely, for fear of losing their production to thieves.

This, coupled with inadequate drying in order to increase profits from their crop has led to lower quality vanilla. The combination of high prices and poor quality means some manufacturers are turning to synthetic alternatives. But many food brands are not open to using artificial flavouring.

Vanilla is every ice-cream company's biggest-selling product. You can bring out a niche flavour but vanilla will still be on top.

SubQuestion No : 8

Q.8 Complete the given sentence according to the passage.

_____ denotes the weight of vanilla beans per gallon.

- (1) Fold
- (2) Spoon
- (3) Ingredient
- (4) Pods

Options 1. 1

2. 2

3. 3

4. 4

Question Type : **MCQ**

Question ID : **4795483891**

Option 1 ID : **47954815405**

Option 2 ID : **47954815406**

Option 3 ID : **47954815407**

Option 4 ID : **47954815408**

Status : **Answered**

Chosen Option : **1**



Comprehension:

Read the given passage carefully and answer the question that follow :

Vanilla is the second most expensive spice in the world, after saffron, a result of its long and labour intensive cultivation. Part of the orchid family, vanilla beans are hand-pollinated on family farms. Each flower opens for only one part of a day during the season; if it is not pollinated on that day, no pod is produced.

Once picked, the curing process, which involves drying the beans in the sun by day and allowing them to sweat in a box at night takes three to six months. The main producers of food grade vanilla, known as black vanilla because of the colour of the dried pods, are Madagascar, followed by Mexico and Tahiti. Vanilla from each country has its own distinctive characteristics but it is Madagascar vanilla that produces the creamy, sweet flavour beloved across the world.

One can get vanilla extract all over the world but Madagascar vanilla is chosen because it has the greatest depth of flavour. There are three main commercial preparations of whole beans, powder and extract. Extract is sold by the 'fold' - a unit that denotes the weight of vanilla beans per gallon. Silver Spoon, which distributes the American Nielsen-Massey vanilla brand in the U.K., explains that the market price of vanilla has risen in recent times. This has been driven largely by a poor quality harvest in Madagascar. Soaring prices will hurt companies that use the ingredient in everything from soft drinks to cakes and perfumes. But the pain will be felt most acutely by ice-cream makers, as it is the most expensive ingredient in the production process and some will be forced to pass on the increased cost to consumers.

When prices are high, market experts say, farmers are tempted to pick beans early. That leads to a less intense flavour, compounding problems in the market. The high-value crop is also a target for criminals. There are reports that vanilla farmers in Madagascar harvested their 2015 crop prematurely, for fear of losing their production to thieves.

This, coupled with inadequate drying in order to increase profits from their crop has led to lower quality vanilla. The combination of high prices and poor quality means some manufacturers are turning to synthetic alternatives. But many food brands are not open to using artificial flavouring.

Vanilla is every ice-cream company's biggest-selling product. You can bring out a niche flavour but vanilla will still be on top.

SubQuestion No : 9

Q.9 Soaring prices of vanilla will hurt companies :

- (1) because vanilla is the most expensive spice in the world
- (2) because people love the sweet flavour of vanilla
- (3) because the spice will be scarce and it will be expensive to use the spice as an ingredient in everything from drinks to food
- (4) because farmers are then tempted to delay picking the vanilla beans thus creating scarcity

- Options**
- 1. 1
 - 2. 2
 - 3. 3
 - 4. 4

Question Type : **MCQ**
Question ID : **4795483897**
Option 1 ID : **47954815429**
Option 2 ID : **47954815430**
Option 3 ID : **47954815431**
Option 4 ID : **47954815432**
Status : **Answered**
Chosen Option : **3**

Comprehension:

Read the given passage carefully and answer the question that follow :

Vanilla is the second most expensive spice in the world, after saffron, a result of its long and labour intensive cultivation. Part of the orchid family, vanilla beans are hand-pollinated on family farms. Each flower opens for only one part of a day during the season; if it is not pollinated on that day, no pod is produced.

Once picked, the curing process, which involves drying the beans in the sun by day and allowing them to sweat in a box at night takes three to six months. The main producers of food grade vanilla, known as black vanilla because of the colour of the dried pods, are Madagascar, followed by Mexico and Tahiti. Vanilla from each country has its own distinctive characteristics but it is Madagascar vanilla that produces the creamy, sweet flavour beloved across the world.

One can get vanilla extract all over the world but Madagascar vanilla is chosen because it has the greatest depth of flavour. There are three main commercial preparations of whole beans, powder and extract. Extract is sold by the 'fold' - a unit that denotes the weight of vanilla beans per gallon. Silver Spoon, which distributes the American Nielsen-Massey vanilla brand in the U.K., explains that the market price of vanilla has risen in recent times. This has been driven largely by a poor quality harvest in Madagascar. Soaring prices will hurt companies that use the ingredient in everything from soft drinks to cakes and perfumes. But the pain will be felt most acutely by ice-cream makers, as it is the most expensive ingredient in the production process and some will be forced to pass on the increased cost to consumers.

When prices are high, market experts say, farmers are tempted to pick beans early. That leads to a less intense flavour, compounding problems in the market. The high-value crop is also a target for criminals. There are reports that vanilla farmers in Madagascar harvested their 2015 crop prematurely, for fear of losing their production to thieves.

This, coupled with inadequate drying in order to increase profits from their crop has led to lower quality vanilla. The combination of high prices and poor quality means some manufacturers are turning to synthetic alternatives. But many food brands are not open to using artificial flavouring.

Vanilla is every ice-cream company's biggest-selling product. You can bring out a niche flavour but vanilla will still be on top.

SubQuestion No : 10

Q.10 Choose the correct statement.

- (1) Vanilla is one of most expensive spices in the world because it has its own distinctive characteristics
- (2) Vanilla extract from each country is easily available
- (3) Madagascar vanilla is has its own distinctive characteristics that is loved across the world
- (4) Lowering of prices of vanilla would lead to lower quality of vanilla

- Options**
- 1. 1
 - 2. 2
 - 3. 3
 - 4. 4

Question Type : **MCQ**
Question ID : **4795483896**
Option 1 ID : **47954815425**
Option 2 ID : **47954815426**
Option 3 ID : **47954815427**
Option 4 ID : **47954815428**
Status : **Answered**
Chosen Option : **3**

Q.11 Change the voice of the following sentence.

Stand up and fall in line.

(A) You are ordered to stand up and fall in line.

(B) You should stand up and fall in line

(C) You are told to fall in line.

(D) You are advised to fall in line.

(1) (A)

(2) (B)

(3) (C)

(4) (D)

Options 1. 1

2. 2

3. 3

4. 4

Question Type : MCQ

Question ID : 4795483914

Option 1 ID : 47954815497

Option 2 ID : 47954815498

Option 3 ID : 47954815499

Option 4 ID : 47954815500

Status : Answered

Chosen Option : 1

Q.12 Change into Indirect Speech.

Mr. Deb said to me, "Have you made that question" ?

(1) Mr. Deb asked me have you made this question.

(2) Mr. Deb enquired of me whether I had made that question.

(3) Mr. Deb enquired of me whether I have made this question.

(4) Mr. Deb asked me if you had made this question.

Options 1. 1

2. 2

3. 3

4. 4

Question Type : MCQ

Question ID : 4795483916

Option 1 ID : 47954815505

Option 2 ID : 47954815506

Option 3 ID : 47954815507

Option 4 ID : 47954815508

Status : Answered

Chosen Option : 2

Q.13 Change into the passive voice.

She wants that she should be treated like a queen.

- (A) She wants to be treated like a queen.
- (B) She wants that she be treated like a queen.
- (C) She should be treated like a queen.
- (D) They should treat her like a queen.

- (1) (A)
- (2) (B)
- (3) (C)
- (4) (D)

Options 1. 1

2. 2

3. 3

4. 4

Question Type : **MCQ**

Question ID : **4795483910**

Option 1 ID : **47954815481**

Option 2 ID : **47954815482**

Option 3 ID : **47954815483**

Option 4 ID : **47954815484**

Status : **Answered**

Chosen Option : **1**

Q.14 Choose the most appropriate word to fill in the blank.

An employment advertisement should _____ the number of vacancies.

- (1) specify
- (2) provide
- (3) declare
- (4) contain

Options 1. 1

2. 2

3. 3

4. 4

Question Type : **MCQ**

Question ID : **4795483900**

Option 1 ID : **47954815441**

Option 2 ID : **47954815442**

Option 3 ID : **47954815443**

Option 4 ID : **47954815444**

Status : **Answered**

Chosen Option : **1**

Q.15 Fill in the blank by choosing the correct option.

To fight the British, leadership and organisation _____.

- (1) was required
- (2) were to be required
- (3) were required
- (4) had been required

Options 1. 1

- 2. 2
- 3. 3
- 4. 4

Question Type : **MCQ**

Question ID : **4795483904**

Option 1 ID : **47954815457**

Option 2 ID : **47954815458**

Option 3 ID : **47954815459**

Option 4 ID : **47954815460**

Status : **Answered**

Chosen Option : **4**

Q.16 Spot the error in the following sentence.

The foremost right / along with right to freedom / is the right to life / and personal liberty.

- | | (A) | (B) | (C) | (D) |
|-----|-----|-----|-----|-----|
| (1) | (A) | | | |
| (2) | (B) | | | |
| (3) | (C) | | | |
| (4) | (D) | | | |

Options 1. 1

- 2. 2
- 3. 3
- 4. 4

Question Type : **MCQ**

Question ID : **4795483906**

Option 1 ID : **47954815465**

Option 2 ID : **47954815466**

Option 3 ID : **47954815467**

Option 4 ID : **47954815468**

Status : **Answered**

Chosen Option : **2**

Q.17 Rearrange the following sentences in a logical order to form a coherent paragraph.

- (A) Megha was required to submit to the bank documents showing her employment records and salary before the bank agreed to give her the loan.
- (B) Megha has taken a loan of Rs. 5 lakh from the bank to purchase a house.
- (C) To secure the loan Megha had to agree to pay an annual interest of 12% and the loan is to be repaid in 10 years
- (D) Besides these, the bank also retained as collateral the papers of the new house, which will be returned to Megha only when she repays the entire loan with interest

- (1) (A) (B) (C) (D)
- (2) (D) (B) (C) (A)
- (3) (C) (B) (A) (D)
- (4) (B) (C) (A) (D)

Options 1. 1

2. 2

3. 3

4. 4

Question Type : **MCQ**

Question ID : **4795483905**

Option 1 ID : **47954815461**

Option 2 ID : **47954815462**

Option 3 ID : **47954815463**

Option 4 ID : **47954815464**

Status : **Answered**

Chosen Option : **4**

Q.18 Change into the passive voice.

Be comfortable.

- (1) You are asked that you could be comfortable
- (2) You are advised to be comfortable
- (3) You have to be comfortable
- (4) You need to be comfortable

Options 1. 1

2. 2

3. 3

4. 4

Question Type : **MCQ**

Question ID : **4795483912**

Option 1 ID : **47954815489**

Option 2 ID : **47954815490**

Option 3 ID : **47954815491**

Option 4 ID : **47954815492**

Status : **Answered**

Chosen Option : **2**



Q.19 Choose the most appropriate word to fill in the blank.

She moved _____ to find her kidnapped daughter.

- (1) heavens
- (2) earth and heaven
- (3) heaven and earth
- (4) heaven and hell

Options 1. 1

2. 2

3. 3

4. 4

Question Type : **MCQ**

Question ID : **4795483909**

Option 1 ID : **47954815477**

Option 2 ID : **47954815478**

Option 3 ID : **47954815479**

Option 4 ID : **47954815480**

Status : **Answered**

Chosen Option : **3**

Q.20 Change into Indirect Narration.

Mohit said, "Bineet won this first round of the games".

- (1) Mohit said that Bineet won this first round of the games.
- (2) Mohit said that Bineet had won this first round of the games.
- (3) Mohit informed that Bineet won the first round of the games.
- (4) Mohit said that Bineet had won that first round of the games.

Options 1. 1

2. 2

3. 3

4. 4

Question Type : **MCQ**

Question ID : **4795483918**

Option 1 ID : **47954815513**

Option 2 ID : **47954815514**

Option 3 ID : **47954815515**

Option 4 ID : **47954815516**

Status : **Answered**

Chosen Option : **4**

Q.21 Choose the most appropriate word to fill in the blank.

In the previous fiscal year 2022-23, the inflation had increased by _____.

- (1) no leaps and bounds
- (2) unknown bounds
- (3) leaps and bounds
- (4) huge leaps and bounds

Options 1. 1

- 2. 2
- 3. 3
- 4. 4

Question Type : **MCQ**

Question ID : **4795483908**

Option 1 ID : **47954815473**

Option 2 ID : **47954815474**

Option 3 ID : **47954815475**

Option 4 ID : **47954815476**

Status : **Answered**

Chosen Option : **3**

Q.22 Change into the active voice.

You are advised not to shred the paper.

- (1) Do not shred the paper.
- (2) Paper cannot be shredded.
- (3) I advice you, do not shred the paper.
- (4) I am asking you to not shred the paper.

Options 1. 1

- 2. 2
- 3. 3
- 4. 4

Question Type : **MCQ**

Question ID : **4795483913**

Option 1 ID : **47954815493**

Option 2 ID : **47954815494**

Option 3 ID : **47954815495**

Option 4 ID : **47954815496**

Status : **Answered**

Chosen Option : **1**

Q.23

Change into the passive voice.

Do you like the lesson ?

- (1) Is the lesson being liked by you ?
- (2) Was the lesson being liked by you ?
- (3) Were the lesson being liked by you ?
- (4) Are the lesson being liked by you ?

Options 1. 1

- 2. 2
- 3. 3
- 4. 4

Question Type : MCQ
Question ID : 4795483911
Option 1 ID : 47954815485
Option 2 ID : 47954815486
Option 3 ID : 47954815487
Option 4 ID : 47954815488
Status : Answered
Chosen Option : 1

Q.24 Fill in the blank by choosing the most appropriate option from the following.

The British Raj impoverished millions of people _____ India.

- (1) at
- (2) in
- (3) on
- (4) with

Options 1. 1

- 2. 2
- 3. 3
- 4. 4

Question Type : MCQ
Question ID : 4795483903
Option 1 ID : 47954815453
Option 2 ID : 47954815454
Option 3 ID : 47954815455
Option 4 ID : 47954815456
Status : Answered
Chosen Option : 2

Q.25 Spot the error in the following sentence.

The Council of Ministers / in India / are headed / by the Prime Minister.

(A) (B) (C) (D)

- (1) (A)
- (2) (B)
- (3) (C)
- (4) (D)

Options 1. 1

- 2. 2
- 3. 3
- 4. 4

Question Type : **MCQ**

Question ID : **4795483907**

Option 1 ID : **47954815469**

Option 2 ID : **47954815470**

Option 3 ID : **47954815471**

Option 4 ID : **47954815472**

Status : **Answered**

Chosen Option : 3

Q.26 Choose the most appropriate option to fill in the blank.

_____ the accident, the train will arrive on time.

- (1) Despite
- (2) In spite
- (3) Despite of
- (4) Beside

Options 1. 1

- 2. 2
- 3. 3
- 4. 4

Question Type : **MCQ**

Question ID : **4795483902**

Option 1 ID : **47954815449**

Option 2 ID : **47954815450**

Option 3 ID : **47954815451**

Option 4 ID : **47954815452**

Status : **Answered**

Chosen Option : 1

Q.27 Choose the most appropriate word to fill in the blank.

The brilliant students will be _____ scholarships as per the announcement made by the Vice Chancellor.

- (1) honoured
- (2) rewarded
- (3) awarded
- (4) forwarded

Options 1. 1

2. 2

3. 3

4. 4

Question Type : **MCQ**

Question ID : **4795483901**

Option 1 ID : **47954815445**

Option 2 ID : **47954815446**

Option 3 ID : **47954815447**

Option 4 ID : **47954815448**

Status : **Not Answered**

Chosen Option : --

Q.28 Change into Indirect Speech.

Mrs. Lamba said, "Don't forget to order the butter".

- (1) Mrs. Lamba requested him to order the butter.
- (2) Mrs. Lamba told him to not to forget about the butter.
- (3) Mrs. Lamba reminded him to order the butter.
- (4) Mrs. Lamba to him that he should not forget about butter.

Options 1. 1

2. 2

3. 3

4. 4

Question Type : **MCQ**

Question ID : **4795483915**

Option 1 ID : **47954815501**

Option 2 ID : **47954815502**

Option 3 ID : **47954815503**

Option 4 ID : **47954815504**

Status : **Answered**

Chosen Option : **2**



Q.29 Change into Indirect Speech.

The beggar said, "May you live long".

- (1) The beggar wished that I might live long.
- (2) The beggar wished that she may live long.
- (3) The beggar prayed that she could live long.
- (4) The beggar prayed that you must live long.

Options 1. 1

2. 2

3. 3

4. 4

Question Type : MCQ

Question ID : 4795483917

Option 1 ID : 47954815509

Option 2 ID : 47954815510

Option 3 ID : 47954815511

Option 4 ID : 47954815512

Status : Answered

Chosen Option : 1

Q.30 Change into Indirect Speech.

Ravi said to the manager, "Let me go home".

- (1) Ravi asked the manager to go home.
- (2) Ravi asked the manager whether he could go home.
- (3) Ravi requested the manager to let him go home.
- (4) Ravi pleaded the manager to allow him to go home.

Options 1. 1

2. 2

3. 3

4. 4

Question Type : MCQ

Question ID : 4795483919

Option 1 ID : 47954815517

Option 2 ID : 47954815518

Option 3 ID : 47954815519

Option 4 ID : 47954815520

Status : Marked For Review

Chosen Option : 3

Comprehension:

Fill in the blank using the most appropriate option

Sudha clutched the crisp notes that her grandfather ___(i)___ her on her birthday. While she really ___(ii)___ to buy a pair of new shoes, she also wanted to just see and feel the ___(iii)___ new notes. It was ___(iv)___ that she noticed that all of them had a smiling face of Gandhiji printed ___(v)___ the right.

SubQuestion No : 31

Q.31

- (i) (1) give
(2) had given
(3) giving
(4) having given

- Options 1. 1
2. 2
3. 3
4. 4

Question Type : MCQ
Question ID : 4795483921
Option 1 ID : 47954815521
Option 2 ID : 47954815522
Option 3 ID : 47954815523
Option 4 ID : 47954815524
Status : Answered
Chosen Option : 2

Comprehension:

Fill in the blank using the most appropriate option

Sudha clutched the crisp notes that her grandfather ___(i)___ her on her birthday. While she really ___(ii)___ to buy a pair of new shoes, she also wanted to just see and feel the ___(iii)___ new notes. It was ___(iv)___ that she noticed that all of them had a smiling face of Gandhiji printed ___(v)___ the right.

SubQuestion No : 32

Q.32

- (iv) (1) than
(2) then
(3) therefore
(4) hence

- Options 1. 1
2. 2
3. 3
4. 4

Question Type : MCQ
Question ID : 4795483924
Option 1 ID : 47954815533
Option 2 ID : 47954815534
Option 3 ID : 47954815535
Option 4 ID : 47954815536
Status : Answered
Chosen Option : 2

Comprehension:

Fill in the blank using the most appropriate option

Sudha clutched the crisp notes that her grandfather ___(i)___ her on her birthday. While she really ___(ii)___ to buy a pair of new shoes, she also wanted to just see and feel the ___(iii)___ new notes. It was ___(iv)___ that she noticed that all of them had a smiling face of Gandhiji printed ___(v)___ the right.

SubQuestion No : 33

Q.33

- (v) (1) at
(2) around
(3) in
(4) on

Options 1. 1

2. 2
3. 3
4. 4

Question Type : MCQ
Question ID : 4795483925
Option 1 ID : 47954815537
Option 2 ID : 47954815538
Option 3 ID : 47954815539
Option 4 ID : 47954815540
Status : Answered
Chosen Option : 1

Comprehension:

Fill in the blank using the most appropriate option

Sudha clutched the crisp notes that her grandfather ___(i)___ her on her birthday. While she really ___(ii)___ to buy a pair of new shoes, she also wanted to just see and feel the ___(iii)___ new notes. It was ___(iv)___ that she noticed that all of them had a smiling face of Gandhiji printed ___(v)___ the right.

SubQuestion No : 34

Q.34

- (iii) (1) fine
(2) soft
(3) crisp
(4) sharp

Options 1. 1

2. 2
3. 3
4. 4

Question Type : MCQ
Question ID : 4795483923
Option 1 ID : 47954815529
Option 2 ID : 47954815530
Option 3 ID : 47954815531
Option 4 ID : 47954815532
Status : Answered
Chosen Option : 3

Comprehension:

Fill in the blank using the most appropriate option

Sudha clutched the crisp notes that her grandfather ___(i)___ her on her birthday. While she really ___(ii)___ to buy a pair of new shoes, she also wanted to just see and feel the ___(iii)___ new notes. It was ___(iv)___ that she noticed that all of them had a smiling face of Gandhiji printed ___(v)___ the right.

SubQuestion No : 35

Q.35

- (ii) (1) want
(2) wanted
(3) wants
(4) wonted

Options 1. 1

2. 2
3. 3
4. 4

Question Type : MCQ

Question ID : 4795483922

Option 1 ID : 47954815525

Option 2 ID : 47954815526

Option 3 ID : 47954815527

Option 4 ID : 47954815528

Status : Answered

Chosen Option : 2

Q.36

Choose the word similar in meaning to the given word.

‘NEBULOUS’

- (1) Vague
(2) Opaque
(3) Insignificant
(4) Tiny

Options 1. 1

2. 2
3. 3
4. 4

Question Type : MCQ

Question ID : 4795483930

Option 1 ID : 47954815557

Option 2 ID : 47954815558

Option 3 ID : 47954815559

Option 4 ID : 47954815560

Status : Answered

Chosen Option : 2

Q.37 Choose the most appropriate **antonym** from the given options.

‘Frivolous’

- (1) Economical
- (2) Violent
- (3) Solemn
- (4) Privilege

Options 1. 1

2. 2

3. 3

4. 4

Question Type : **MCQ**

Question ID : **4795483927**

Option 1 ID : **47954815545**

Option 2 ID : **47954815546**

Option 3 ID : **47954815547**

Option 4 ID : **47954815548**

Status : **Answered**

Chosen Option : **3**

Q.38 Choose the most appropriate option to fill in the blank.

His parents were transferred to Delhi _____ he was ten years old.

- (1) when
- (2) since
- (3) while
- (4) by

Options 1. 1

2. 2

3. 3

4. 4

Question Type : **MCQ**

Question ID : **4795483938**

Option 1 ID : **47954815589**

Option 2 ID : **47954815590**

Option 3 ID : **47954815591**

Option 4 ID : **47954815592**

Status : **Answered**

Chosen Option : **2**



Q.39 What does 'New Delhi' refer to in the following sentence ?

New Delhi announced that the President of India will start her three-day official visit to Europe this Sunday.

- (1) The Government of India
- (2) The Government of New Delhi
- (3) The Capital of India
- (4) A Modern City

Options 1. 1

- 2. 2
- 3. 3
- 4. 4

Question Type : **MCQ**

Question ID : **4795483935**

Option 1 ID : **47954815577**

Option 2 ID : **47954815578**

Option 3 ID : **47954815579**

Option 4 ID : **47954815580**

Status : **Answered**

Chosen Option : **1**

Q.40 Fill in the blanks with the correct option.

_____ he _____ to the mall yesterday ?

- (1) Does, go
- (2) Will, go
- (3) Did, go
- (4) Did, went

Options 1. 1

- 2. 2
- 3. 3
- 4. 4

Question Type : **MCQ**

Question ID : **4795483937**

Option 1 ID : **47954815585**

Option 2 ID : **47954815586**

Option 3 ID : **47954815587**

Option 4 ID : **47954815588**

Status : **Answered**

Chosen Option : **4**

Q.41 Choose the most appropriate synonym from the given options.

‘Remorse’

- (1) Elegant
- (2) Mutiny
- (3) Repeat
- (4) Repentance

Options 1. 1

2. 2

3. 3

4. 4

Question Type : MCQ

Question ID : 4795483929

Option 1 ID : 47954815553

Option 2 ID : 47954815554

Option 3 ID : 47954815555

Option 4 ID : 47954815556

Status : Answered

Chosen Option : 4

Q.42 Choose the most appropriate antonym from the given options.

‘Amplify’

- (1) Enlarge
- (2) Expand
- (3) Contract
- (4) Elevate

Options 1. 1

2. 2

3. 3

4. 4

Question Type : MCQ

Question ID : 4795483928

Option 1 ID : 47954815549

Option 2 ID : 47954815550

Option 3 ID : 47954815551

Option 4 ID : 47954815552

Status : Answered

Chosen Option : 3

Q.43 Choose the most appropriate word to fill in the blank.

Is there anything interesting _____ the news today ?

- (1) at
- (2) by
- (3) in
- (4) on

Options 1. 1

- 2. 2
- 3. 3
- 4. 4

Question Type : **MCQ**

Question ID : **4795483939**

Option 1 ID : **47954815593**

Option 2 ID : **47954815594**

Option 3 ID : **47954815595**

Option 4 ID : **47954815596**

Status : **Answered**

Chosen Option : **3**

Q.44 Complete the following sentence by choosing the most appropriate question tag.

Shut up, _____ ?

- (1) will you
- (2) can you
- (3) won't you
- (4) can't you

Options 1. 1

- 2. 2
- 3. 3
- 4. 4

Question Type : **MCQ**

Question ID : **4795483931**

Option 1 ID : **47954815561**

Option 2 ID : **47954815562**

Option 3 ID : **47954815563**

Option 4 ID : **47954815564**

Status : **Marked For Review**

Chosen Option : **4**



Q.45

Choose the correctly spelt word.

- (1) daub
- (2) dazzel
- (3) dawdel
- (4) dangel

Options 1. 1

- 2. 2
- 3. 3
- 4. 4

Question Type : MCQ

Question ID : 4795483933

Option 1 ID : 47954815569

Option 2 ID : 47954815570

Option 3 ID : 47954815571

Option 4 ID : 47954815572

Status : Marked For Review

Chosen Option : 2

Q.46

Complete the following sentence by choosing the most appropriate question tag.

Krishna could have bought a new laptop, _____ ?

- (1) could she ?
- (2) couldn't she ?
- (3) have she ?
- (4) haven't she ?

Options 1. 1

- 2. 2
- 3. 3
- 4. 4

Question Type : MCQ

Question ID : 4795483932

Option 1 ID : 47954815565

Option 2 ID : 47954815566

Option 3 ID : 47954815567

Option 4 ID : 47954815568

Status : Answered

Chosen Option : 2



Q.47 Given below are two sentences. Which of the given options fit correctly in the sentences ?

- (A) _____ makes a man perfect.
(B) _____ the questions given in the assignment.
- (1) Practise; Practice
(2) Practised; Practice
(3) Practice; Practise
(4) Practiced; Practise

Options 1. 1

2. 2
3. 3
4. 4

Question Type : MCQ

Question ID : 4795483934

Option 1 ID : 47954815573

Option 2 ID : 47954815574

Option 3 ID : 47954815575

Option 4 ID : 47954815576

Status : Answered

Chosen Option : 3

Q.48 Choose the most appropriate antonym from the given options.

‘Explicit’

- (1) Apparent
(2) Hidden
(3) Dignify
(4) Avoid

Options 1. 1

2. 2
3. 3
4. 4

Question Type : MCQ

Question ID : 4795483926

Option 1 ID : 47954815541

Option 2 ID : 47954815542

Option 3 ID : 47954815543

Option 4 ID : 47954815544

Status : Answered

Chosen Option : 2

Q.49 Choose the most appropriate word to fill in the blank.

Ramesh fell down while he was running _____ a bus.

- (1) after
- (2) over
- (3) through
- (4) into

Options 1. 1

- 2. 2
- 3. 3
- 4. 4

Question Type : MCQ
Question ID : 4795483940
Option 1 ID : 47954815597
Option 2 ID : 47954815598
Option 3 ID : 47954815599
Option 4 ID : 47954815600
Status : Answered
Chosen Option : 1

Q.50 Find the part of the following sentence that has an error.

The young woman who is watching television in that room lived here for more than a year, but she has never created any problem for us.

- (1) The young woman who is watching television in that room
- (2) lived here for more than a year
- (3) but she has never created any problem for us
- (4) No error

Options 1. 1

- 2. 2
- 3. 3
- 4. 4

Question Type : MCQ
Question ID : 4795483936
Option 1 ID : 47954815581
Option 2 ID : 47954815582
Option 3 ID : 47954815583
Option 4 ID : 47954815584
Status : Answered
Chosen Option : 4

Section : Computer Literacy

Q.1 The correct statement in the context of "Ribbon" in Microsoft Word 2016 is :

- (1) It contains all of the tools that a user uses to interact. The Ribbon has a number of tabs, each of which contains buttons.
- (2) It is the workspace which contains rulers, margins, scroll bar, etc.
- (3) It contains a library of predefined document templates from where users may choose one as per their need.
- (4) The Ribbon is not associated with Microsoft Word 2016.

Options 1. 1

- 2. 2
- 3. 3
- 4. 4

Question Type : **MCQ**

Question ID : **4795483946**

Option 1 ID : **47954815621**

Option 2 ID : **47954815622**

Option 3 ID : **47954815623**

Option 4 ID : **47954815624**

Status : **Answered**

Chosen Option : **1**

Q.2 The network topology which provides the highest level of fault tolerance and redundancy is :

- (1) Star topology
- (2) Mesh topology
- (3) Ring topology
- (4) Bus topology

Options 1. 1

- 2. 2
- 3. 3
- 4. 4

Question Type : **MCQ**

Question ID : **4795483945**

Option 1 ID : **47954815617**

Option 2 ID : **47954815618**

Option 3 ID : **47954815619**

Option 4 ID : **47954815620**

Status : **Answered**

Chosen Option : **2**



Q.3 Given below are two statements : One is labelled as **Assertion (A)** and the other is labelled as **Reason (R)**.

Assertion (A) : Cache memory is a high-speed memory that holds the most recent data and instructions that have been loaded by the CPU.

Reason (R) : CPU-resident cache is called Level-1 (L1), while external cache is called Level-2 (L2).

In the light of the above statements, choose the **correct** answer from the options given below :

- (1) Both **(A)** and **(R)** are true and **(R)** is the correct explanation of **(A)**.
- (2) Both **(A)** and **(R)** are true but **(R)** is not the correct explanation of **(A)**.
- (3) **(A)** is true but **(R)** is false.
- (4) **(A)** is false but **(R)** is true.

- Options**
- 1. 1
 - 2. 2
 - 3. 3
 - 4. 4

Question Type : **MCQ**
Question ID : **4795483943**
Option 1 ID : **47954815609**
Option 2 ID : **47954815610**
Option 3 ID : **47954815611**
Option 4 ID : **47954815612**
Status : **Answered**
Chosen Option : **2**

Q.4 Which of the following statements are **true** in the context of computer networks ?

- (A) The size of WAN generally lies between that of LAN and MAN.
- (B) Network protocol is the standard according to which different computers over the network communicate with each other.
- (C) Intranet is a private network of computers, usually contained within an organization.
- (D) Application layer is responsible for the delivery of packets.
- (E) Transport layer is responsible for managing all the user interface requirements.

Choose the most appropriate answer from the options given below :

- (1) (A) and (B) only
- (2) (B) and (C) only
- (3) (C) and (D) only
- (4) (A) and (E) only

- Options**
- 1. 1
 - 2. 2
 - 3. 3
 - 4. 4

Question Type : **MCQ**
Question ID : **4795483942**
Option 1 ID : **47954815605**
Option 2 ID : **47954815606**
Option 3 ID : **47954815607**
Option 4 ID : **47954815608**
Status : **Answered**
Chosen Option : **2**

Q.5 Which of the following statements are **false** in the context of number systems used in computers ?

- (A) (25) decimal number is equivalent to (11001) in binary number system.
- (B) (AB) hexadecimal number is equivalent to (453) in octal number system.
- (C) (10.5) decimal number is equivalent to (A.8) in hexadecimal number system.
- (D) (F1) hexadecimal number is equivalent to (361) in octal number system.
- (E) (101011) binary number is equivalent to (2C) in hexadecimal number system.

Choose the most appropriate answer from the options given below :

- (1) (A) and (B) only
- (2) (C) and (E) only
- (3) (C) and (D) only
- (4) (B) and (E) only

Options 1. 1

- 2. 2
- 3. 3
- 4. 4

Question Type : **MCQ**

Question ID : **4795483944**

Option 1 ID : **47954815613**

Option 2 ID : **47954815614**

Option 3 ID : **47954815615**

Option 4 ID : **47954815616**

Status : **Not Answered**

Chosen Option : --

Q.6 Which of the following statements are **true** in the context of performing "Binary Shift" of data in Computers ?

- (A) In arithmetic right shift, the sign of the number is preserved.
- (B) In arithmetic right shift, no bits are lost during the shift.
- (C) In logical shift, bits shifted out of the register are replaced with least significant bits(LSBs).
- (D) In arithmetic right shift, the most significant bit (MSB) is retained after shifting.
- (E) In cyclic shift, bits are lost during the shift.

Choose the most appropriate answer from the options given below :

- (1) (B) and (C) only
- (2) (A) and (D) only
- (3) (B) and (D) only
- (4) (C) and (E) only

Options 1. 1

- 2. 2
- 3. 3
- 4. 4

Question Type : **MCQ**

Question ID : **4795483941**

Option 1 ID : **47954815601**

Option 2 ID : **47954815602**

Option 3 ID : **47954815603**

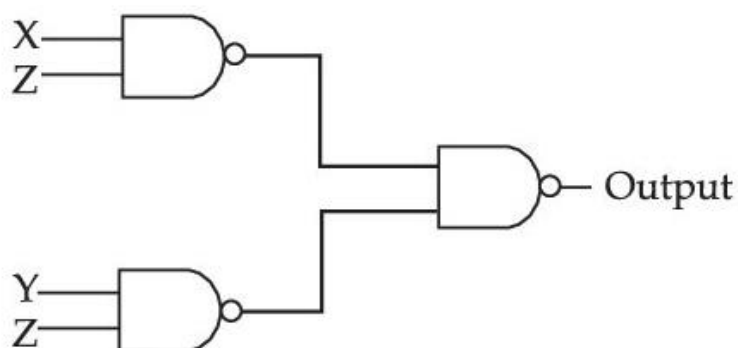
Option 4 ID : **47954815604**

Status : **Not Answered**

Chosen Option : --

Q.7

The output of the following boolean circuit is :



(1) $\overline{XZ} + \overline{YZ}$

(2) $XZ + YZ$

(3) $\overline{XZ} + YZ$

(4) $XZ + \overline{YZ}$

Options 1. 1

2. 2

3. 3

4. 4

Question Type : MCQ

Question ID : 4795483949

Option 1 ID : 47954815633

Option 2 ID : 47954815634

Option 3 ID : 47954815635

Option 4 ID : 47954815636

Status : Answered

Chosen Option : 1

Q.8 Match List-I with List-II

List-I	List-II
(MS-Word shortcut keys)	(Description)
(A) Ctrl+Z	(I) Save the document
(B) Ctrl+Y	(II) Print the document
(C) Ctrl+P	(III) Undo changes
(D) Ctrl+S	(IV) Redo changes

Choose the most appropriate answer from the option given below :

- (1) (A)-(III), (B)-(IV), (C)-(I), (D)-(II)
- (2) (A)-(III), (B)-(IV), (C)-(II), (D)-(I)
- (3) (A)-(IV), (B)-(III), (C)-(I), (D)-(II)
- (4) (A)-(IV), (B)-(III), (C)-(II), (D)-(I)

Options 1. 1

2. 2

3. 3

4. 4

Question Type : MCQ

Question ID : 4795483947

Option 1 ID : 47954815625

Option 2 ID : 47954815626

Option 3 ID : 47954815627

Option 4 ID : 47954815628

Status : Answered

Chosen Option : 2

Q.9 Which of the following is/are word processing program(s) ?

- (A) MS-Access
- (B) MS-Word
- (C) Adobe Acrobat

Choose the most appropriate answer from the options given below :

- (1) (A) and (B) only
- (2) (B) and (C) only
- (3) (B) only
- (4) (C) only

Options 1. 1

2. 2

3. 3

4. 4

Question Type : MCQ

Question ID : 4795483948

Option 1 ID : 47954815629

Option 2 ID : 47954815630

Option 3 ID : 47954815631

Option 4 ID : 47954815632

Status : Answered

Chosen Option : 2



Q.10 Match List-I with List-II.

List-I	List-II
(Computer devices)	(Functions)
(A) OMR device	(I) Prints large-size high quality graphs and images.
(B) Trackball	(II) Electronically captures text and images and converts them to computer readable form.
(C) Scanner	(III) Recognizes characters written in the marked fields only.
(D) Plotter	(IV) Pointing device used to move cursor on the screen.

Choose the most appropriate answer from the options given below :

- (1) (A)-(III), (B)-(IV), (C)-(I), (D)-(II)
- (2) (A)-(III), (B)-(IV), (C)-(II), (D)-(I)
- (3) (A)-(IV), (B)-(III), (C)-(I), (D)-(II)
- (4) (A)-(IV), (B)-(III), (C)-(II), (D)-(I)

- Options
- 1. 1
 - 2. 2
 - 3. 3
 - 4. 4

Question Type : MCQ
Question ID : 4795483950
Option 1 ID : 47954815637
Option 2 ID : 47954815638
Option 3 ID : 47954815639
Option 4 ID : 47954815640
Status : Answered
Chosen Option : 2

