



# Teachingninja.in



**Latest Govt Job updates**



**Private Job updates**



**Free Mock tests available**



**Visit - [teachingninja.in](https://teachingninja.in)**

# **MPSC Forest Guard**

**Memory Based Paper**  
**01 Aug, 2023**



## 60 Questions

---

**Que. 1** माता न तू वैरिणी, माता न तू वैरिणी या ओळीत कोणता अलंकार आहे?

1. ससंदेह
2. अपन्हुती
3. व्याजोक्ती
4. अतिशायोक्ती

Correct Option - 2

---

**Que. 2** इतक्या मोठ्याने ढगांचा गडगडाट झाला की झाडे उन्मळून पडली, पायाखालची जमिन सरकली, पर्वत हादरले. अलंकार ओळखा

1. अनुप्रास अलंकार
2. यमक अलंकार
3. उपमा अलंकार
4. अतिशयोक्ती अलंकार

Correct Option - 4

---

**Que. 3** दोन वस्तूंमधील साम्य चमत्कृतीपूर्ण रीतीने जिथे वर्णन केलेले असते तिथे कोणता अलंकार असतो.

1. यमक
2. श्लेष
3. उत्प्रेक्षा
4. उपमा

Correct Option - 4

---

**Que. 4** अलंकार ओळखा - सावळाच रंग तुझा पावसाळी नभापरी !

1. श्लेष अलंकार
2. पर्यायोक्ती अलंकार
3. अपन्हुती अलंकार
4. उपमा अलंकार

Correct Option - 4

---

**Que. 5** 'समशेर' - या शब्दाचा समानार्थी शब्द शोधा.

1. भाला

2. कुन्हाड
3. तलवार
4. प्रख्यात

Correct Option - 3

---

**Que. 6** खालील शब्दांपैकी समानार्थी नसलेला शब्द कोणता?

1. पाणी
2. जल
3. पाऊस
4. नीर

Correct Option - 3

---

**Que. 7** दिलेल्या शब्दगटातून विरुद्धार्थी शब्द ओळखा.

गणेशोत्सव - वैयक्तिक X \_\_\_\_\_

1. परंपरागत
2. आवडता
3. आधुनिक
4. सार्वजनिक

Correct Option - 4

---

**Que. 8** पुढील वाक्यांतील प्रयोग ओळखा -  
'नमिताने पुस्तक अभ्यासले'

1. अकर्मक कर्तरी प्रयोग
2. भावे प्रयोग
3. कर्तरी प्रयोग
4. कर्मणी प्रयोग

Correct Option - 4

---

**Que. 9** हात हलवत परत येणे या वाक्प्रचाराच्या विरुद्ध वाक्प्रचार कोणता?

1. हात चोळत येणे
2. हातपाय गळणे
3. काम तडीस नेणे
4. रिकामे होणे

Correct Option - 3

**Que. 10** आजीबाईचा मोठा मुलगा डॉक्टर आहे. वाक्यातील विशेषण ओळखा.

1. डॉक्टर
2. मुलगा
3. मोठा
4. आहे

Correct Option - 3

**Que. 11** आंधळा मागतो एक डोळा, देव देतो दोन डोळे या म्हणीचा अर्थ-

1. अपेक्षेपेक्षा जास्त फायदा होणे
2. डोळ्यांना इजा होणे.
3. संकट येणे
4. एखाद्याला फसवणे

Correct Option - 1

**Que. 12** खालील शब्दसमूहासाठी योग्य शब्द निवडा. 'केलेला उपकार जो जाणत नाही असा'

1. कृतज्ञ
2. कृतघ्न
3. निरिच्छ
4. कर्मयोगी

Correct Option - 2

**Que. 13** इरावती कर्वे लिखित सुप्रसिद्ध कादंबरी कोणती?

1. काजळमाया
2. युगांत
3. खेकडा
4. सनसनाटी

Correct Option - 2

**Que. 14** समानार्थी शब्दाच्या जोड्या लावा:

	‘अ’		‘ब’
अ	फुल	i.	एकाक्ष
ब	कावळा	ii.	अंडज
क	डोळा	iii.	सुम

ड	पक्षी	iv.	चक्षु
---	-------	-----	-------

1. अ – iv, ब – i, क – ii, ड - iii
2. अ – ii, ब – iii, क – i, ड - iv
3. अ – iii, ब – i, क – iv, ड - ii
4. अ – i, ब – ii, क – iii, ड - iv

Correct Option - 3

**Que. 15** सामासिक शब्द व तत्पुरुष समासाचे उपप्रकार यांच्या योग्य जोड्या जुळवा.

	सामासिक शब्द		समास
(a)	गायान	(i)	सप्तमी तत्पुरुष
(b)	ऋणमुक्त	(ii)	पंचमी तत्पुरुष
(c)	भूपती	(iii)	चतुर्थी तत्पुरुष
(d)	पाणकोंबडा	(iv)	षष्ठी तत्पुरुष

1. (a) - (iii), (b) - (ii), (c) - (iv), (d) - (i)
2. (a) - (ii), (b) - (i), (c) - (iii), (d) - (iv)
3. (a) - (iii), (b) - (ii), (c) - (i), (d) - (iv)
4. (a) - (ii), (b) - (iii), (c) - (iv), (d) - (i)

Correct Option - 1

**Que. 16** Direction: Select the most appropriate synonym of the given word.

Console

1. assist
2. comfort
3. share
4. sympathise

Correct Option - 2

**Que. 17** Select the synonym of the given word.

Coarse

1. Rough
2. Tired
3. Smooth
4. Stiff

Correct Option - 1

---

**Que. 18** Select the appropriate antonym for the underlined word.

The arms and legs lay in a careless way.

1. Vigilant
2. Unsafe
3. Forgetful
4. Neglectful

Correct Option - 1

---

**Que. 19** Select the most appropriate ANTONYM of the underlined word.

The colossal building stood amidst the ruins bearing signs of Victorian architecture

1. Enormous
2. Extraordinary
3. Quaint
4. Tiny

Correct Option - 4

---

**Que. 20** **Directions:** In the following question, out of the four alternatives, select the alternative which best expresses the meaning of the idiom/phrase.

Jump on the bandwagon

1. To seize an opportunity
2. to follow the trend
3. To pass the exam
4. To not feel well

Correct Option - 2

---

**Que. 21** In the following question, out of the given four alternatives, select the alternative which best expresses the meaning of the idiom/phrase.

Make a mockery of

1. To bully little kids
2. Befool people
3. Unable to prove
4. Make something look foolish/absurd

Correct Option - 4

---

**Que. 22** Select the most appropriate article to fill in the blank. In case no article is needed, select 'No article required'.

He hit me on \_\_\_\_\_ back

1. the
2. an
3. No article required
4. a

Correct Option - 1

**Que. 23** **Direction: In the following question, a sentence has been given in Active (or Passive) voice. Out of the four alternatives suggested, select the one which best expresses the same sentence in Passive (or Active) voice.**

Who teaches you English ?

1. By whom were you taught English?
2. By whom are you taught English?
3. English is taught by whom?
4. By whom will you be taught English?

Correct Option - 2

**Que. 24** **Direction: Select the correct passive form of the given sentence.**

I know him.

1. He is known to me.
2. He was known.
3. He were being known to me.
4. He has been known to me.

Correct Option - 1

**Que. 25** **Choose the correct indirect speech of the given sentence from the options that follow:**

She says, "I am going to school."

1. She said that she is going to school.
2. She said that she was going to school
3. She says that she is going to school.
4. She says that I am going to school.

Correct Option - 3

**Que. 26** **Select the correct indirect form of the given sentence.**

Radhika said to her friend, "Do not waste water."



1. Radhika advised her friend not to have wasted water.
2. Radhika advised her friend not waste water.
3. Radhika advised her friend not to waste water.
4. Radhika advised her friend to save water.

Correct Option - 3

---

**Que. 27** From the given options, select the one which can replace the given expression:

One who is new and inexperienced in a certain job

1. Versatile
2. Veteran
3. Namesake
4. Novice

Correct Option - 4

---

**Que. 28** Find out to error in following sentence:-

I will give you / an award if you / do your work / with satisfactory

1. I will give you
2. an award if you
3. do your work
4. with satisfactory

Correct Option - 4

---

**Que. 29** Identify the segment in the sentence which contains the grammatical error from the given options.

Humans are not on the menu of sharks: sharks bite humans out of curiosity or to defend itself.

1. Humans are
2. defend itself
3. out of curiosity
4. menu of sharks

Correct Option - 2

---

**Que. 30** Rearrange the parts of the sentence in correct order.

Human rights are rights

P: consequence of inherent human vulnerability, or because

Q: that belong to an individual or group of

R: they are requisite to the possibility of a just society

S: individuals simply for being human, or as a

1. RPSQ

2. QRPS
3. QSPR
4. SPQR

Correct Option - 3

---

**Que. 31** On 27 February 2023, Prime Minister Narendra Modi inaugurated which airport with a lotus-shaped terminal?

1. Bareilly Airport
2. Saran Airport
3. Shivamogga airport
4. Dhubri Airport

Correct Option - 3

---

**Que. 32** Human Development Index report is published by which of the following?

1. World Economic Forum
2. World Bank
3. United Nations Development Programme
4. International Monetary Fund

Correct Option - 3

---

**Que. 33** Which among the following dance forms is not related to Karnataka?

1. Rauf
2. Huttari
3. Suggi
4. Karaga

Correct Option - 1

---

**Que. 34** With reference to the 13th Amendment to the Sri Lankan Constitution, consider the following statements and choose the *incorrect* one:

1. It is an outcome of the Indo-Lanka Accord of July 1987.
2. It was signed by the then-Indian PM Indira Gandhi and President J.R. Jayawardene.
3. It led to the creation of Provincial Councils to enable all nine provinces in the country to self-govern.
4. It was an attempt to resolve the ethnic conflict and civil war in Sri Lanka.

Correct Option - 2

---

**Que. 35** Senior-most Supreme Court judge D. Y. Chandrachud succeed \_\_\_\_\_ to be appointed as the 50th Chief Justice of India.

1. K. N. Singh
2. U. U. Lalit
3. S. A. Bobde
4. N. V. Ramana

Correct Option - 2

---

**Que. 36** Which of the following vocalists from Kirana Gharana was awarded the Padma Vibhushan in 2022?

1. Nagaraja Rao Havaladar
2. Prabha Atre
3. Srivani Jade
4. Milind Chitta

Correct Option - 2

---

**Que. 37** The Indian Space Research Organisation (ISRO) successfully launched India's largest Launch Vehicle Mark-III (LVM3) rocket/OneWeb India-2 Mission with \_\_\_\_\_ satellites onboard, from Satish Dhawan Space Centre in Sriharikota?

1. 36
2. 27
3. 40
4. 18

Correct Option - 1

---

**Que. 38** 'Dilwara Temple' is located at-

1. Jaisalmer
2. Sirohi
3. Mount Abu
4. Sri Mahaveerji

Correct Option - 3

---

**Que. 39** Consider the following statements regarding Minority Communities:

1. Muslims and Sikhs and Zoroastrians (Parsis) have been notified as minority communities under the National Commission for Minorities (NCM) Act, 1992.

2. As per the Census 2011, minorities make up about 25% of the total population of the country.

Which of the statements given above is/are correct?

1. 1 only
2. 2 only
3. Both 1 and 2
4. Neither 1 nor 2

Correct Option - 1

---

**Que. 40** Himalaya Frontal Fault separates Shivalik from \_\_\_\_\_.

1. Small Himalaya
2. Central Himalayas
3. The Great Himalayas
4. Great Plains of India

Correct Option - 4

---

**Que. 41** The State of India with the highest percentage of tribal population to its total population as per the 2011 Census is

1. Arunachal Pradesh
2. Nagaland
3. Mizoram
4. Meghalaya

Correct Option - 3

---

**Que. 42** When did the treaty between the government of India and the Government of Pakistan concerning the utilisation of the waters of the Indus system of rivers come into existence?

1. September 19, 1960
2. October 19, 1960
3. November 19, 1960
4. December 19, 1960

Correct Option - 1

---

**Que. 43** Arrange the following events in chronological order:

- I. Kalinga War
- II. Accession of Bindusar
- III. Shunga Dynasty

1. I, II, III
2. II, I, III
3. III, I, II
4. II, III, I

Correct Option - 2

---

**Que. 44** Which of the following is/are the aims of National Forest Policy 1988?

- a. Bringing 33 per cent of the geographical area under forest cover.
- b. Reduction of floods and droughts.

c. Creating people's movement to encourage the planting of trees.

Select the correct answer using the code given below.

1. a only
2. b and c only
3. a and c only
4. a, b and c

Correct Option - 4

---

**Que. 45** Which Article of the constitution of India is related to the joint session of the parliament ?

1. 72
2. 102
3. 108
4. 111

Correct Option - 3

---

**Que. 46** In the following question, select the missing number from the given series.

13, 17, ?, 28, 35, 43

1. 20
2. 22
3. 25
4. 26

Correct Option - 2

---

**Que. 47** 'A' is the sister of 'B'. 'B' is married to 'D'. 'D' is the brother of 'K'. 'B' and 'D' have one daughter 'G'. How is 'A' related to 'D'?

1. Sister
2. Brother-In-Law
3. Daughter-In-Law
4. Sister-In-Law

Correct Option - 4

---

**Que. 48** A certain number of people are sitting in a row, facing North. R is to the immediate left of O. Z is fourth to the right of R. Only three people sit between G and R. Only three people sit between X and O. W is at the immediate right of Z. If no other person is sitting in the row, what is the total number of persons seated?

1. 10
2. 11
3. 9

4. 12

Correct Option - 1

**Que. 49** Six people A, B, C, D, E and F are sitting around a circular table facing the centre. B sits second to the right of E. C sits to the immediate left of E. F sits second to the right of D. Who sits third to the right of A?

- 1. D
- 2. C
- 3. E
- 4. B

Correct Option - 1

**Que. 50** Which of the following answer figures is the water image of the given figure?

Z6d351bLO

- 1. Z0q32JpΓO
- 2. Z0q351pΓO
- 3. Z0q351qJ O
- 4. Z0q32JbΓO

Correct Option - 1





**Que. 51** A series is given with one term missing. Select the correct alternative from the given ones that will complete the series.

BZA, DYC, FXE, HWG, \_\_\_\_\_

- 1. JVI
- 2. HIJ
- 3. ISH
- 4. PWD

Correct Option - 1

**Que. 52** Select the option that correctly represents the relationship among the following:  
Pink, Lily, Flower

1. 
2. 
3. 
4. 

Correct Option - 2

**Que. 53** One morning, a guy starts walking in a particular direction for 5 km. and then takes a left and another 5 km. again takes a left and walks another 5 km. At last, he takes a right and walks 5 km. Now, he sees his shadow in front of him. What direction did he start initially?

1. South
2. East
3. North
4. West

Correct Option - 3

**Que. 54** In this question, a statement is given followed by two conclusions. Choose the conclusion(s) which best fit(s) logically.

**Statement:**

Vegetable prices are soaring in the market.

**Conclusions:**

- I. Vegetables are becoming a rare commodity.
- II. People cannot eat vegetables.

1. Both conclusions I and II follow
2. Only conclusion II follows
3. Only conclusion I follows
4. Neither conclusion I nor II follows

Correct Option - 4

**Que. 55**

Select the option that is related to the third term in the same way as the second term is related to the first term.



- 1.
- 2.
- 3.
- 4.

Correct Option - 2

**Que. 56** Select the option in which the given figure is embedded (rotation is NOT allowed).

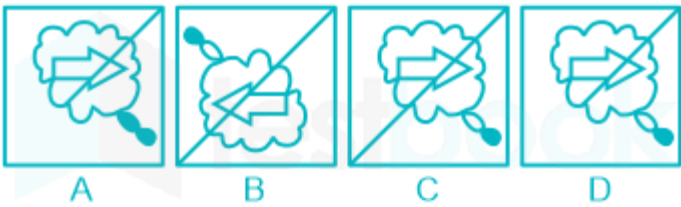


- 1.
- 2.
- 3.
- 4.



Correct Option - 3

**Que. 57** Choose the mirror image for the following figure when the mirror is kept on the MN line.



- 1. C
- 2. B
- 3. D
- 4. A

Correct Option - 1

**Que. 58**  $63 - (-3)(-2 - 8 - 4) \div [3 \{5 + (-2)(-1)\}] = ?$

- 1. 65
- 2. 60
- 3. -60
- 4. 61

Correct Option - 4

**Que. 59** What should come in place of the question mark (?) in the following question?

$2 - [6 - \{3 + (-4 + 5 + 1) \times 8\} + 12] = ?$

- 1. 4
- 2. 2
- 3. 3
- 4. 1

Correct Option - 3

**Que. 60**  $45 - [38 - \{80 \div 4 - (8 - 12 \div 3) \div 4\}] = ?$

- 1. 25

- 2. 27
- 3. 26
- 4. 28

Correct Option - 3



Teachingninja.in