



Teachingninja.in



Latest Govt Job updates



Private Job updates



Free Mock tests available



Visit - teachingninja.in

MPSC Forest Guard

Memory Based Paper
02 Aug, 2023



60 Questions

Que. 1 क्रौंचवध ही प्रसिद्ध कादंबरी कोणी लिहिली आहे?

1. शिवाजी सावंत
2. वि.स.खांडेकर
3. पु.ल.देशपांडे
4. रणजित देसाई

Correct Option - 2

Que. 2 मीनलचे पेन काल हरवले. प्रयोग ओळखा.

1. कर्मणी
2. सकर्मक कर्तरी
3. अकर्मक कर्तरी
4. भावे

Correct Option - 3

Que. 3 शब्दसमूहाबद्दल एक शब्द सांगा.

अतिशय लवकर रागवणारा

1. बहुरूपी
2. व्यवहारज्ञानी
3. मूर्खशिरोमणि
4. शीघ्रकोपी

Correct Option - 4

Que. 4 'रामा फार उतावळा आहे' या वाक्यातील 'उतावळा' या विशेषणाचे विशेषण ओळखा.

1. रामा
2. आहे
3. फार
4. उतावळा

Correct Option - 3

Que. 5 दिलेल्या शब्दाचा विरुद्धार्थी शब्द सांगा.

विरक्ती

1. अनुरक्त
2. आसक्ती
3. आरक्त
4. अनासक्ती

Correct Option - 2

Que. 6 पुढील म्हण पूर्ण करण्यासाठी योग्य पर्याय निवडा. पी हळद नि हो _____.

1. गोरी
2. पिवळी
3. हळदुली
4. शहाणी

Correct Option - 1

Que. 7 नामांच्या किंवा सर्वनामांच्या रूपात जो बदल होतो त्यास _____ म्हणतात.

1. प्रयोग
2. प्रत्यय
3. विभक्ती
4. समास

Correct Option - 3

Que. 8 पुढीलपैकी कोणत्या पर्यायातील वाक्यात शब्दयोगी अव्यय आले आहे?

1. आंबा खाली पडला
2. पतंग वर गेला
3. पांथस्त झाडाखाली बसले आहेत
4. चालत चालत मी दूर गेलो

Correct Option - 3

Que. 9 अबब! हा शब्द खालीलपैकी कोणत्या प्रकारचा आहे?

1. केवलप्रयोगी अव्यय
2. विशेषण
3. उभयान्वयी अव्यय
4. क्रियापद

Correct Option - 1

Que. 10 'वचन विचार' लक्षात घेऊन प्रस्तुत पर्यायांपैकी गटात न बसणारा शब्द कोणता?

1. भाकरी
2. बी
3. नळी
4. सभा

Correct Option - 4

Que. 11 'अपाय' या शब्दाचा योग्य समानार्थी शब्द निवडा.

1. कारावास
2. इजा
3. उपाय
4. कल्पना

Correct Option - 2

Que. 12 एखाद्याच्या चांगुलपणाचा गैरफायदा घेऊ नये. या अर्थाची योग्य म्हण ओळखा.

1. बळी तो कान पिळी
2. मऊ सापडले म्हणून कोपराने खणू नये
3. भित्यापाठी ब्रम्हराक्षस
4. सगळे मुसळ केरात

Correct Option - 2

Que. 13 पुढील वाक्यात पर्यायातील अचूक वाक्प्रचार निवडा.

पावसाने पाठ फिरवल्याने शेतकऱ्यांची मेहनत वाया गेली.

1. पाणी पडणे
2. पडझड होणे
3. उरी फुटणे
4. अन्नास लावणे

Correct Option - 1

Que. 14 दहणांचिया अंगी निघे ताक लोणी I एका मोले दोन्ही मार्गों नये II
वरील ओळीतील वृत्त कोणते?

1. ओवी
2. नववधू

3. अभंग
4. पादाकुलक

Correct Option - 3

Que. 15 'कृशान' शब्दाचा योग्य समानार्थी शब्द ओळखा.

1. वायू
2. आग
3. जल
4. पर्वत

Correct Option - 2

Que. 16 **Direction:** Choose the word nearest to the meaning of the given words.

Convert

1. change
2. delicate
3. comfort
4. None of these

Correct Option - 1

Que. 17 Choose the word nearest in meaning to the given word.

Comprise

1. none
2. yield
3. separate
4. include

Correct Option - 4

Que. 18 Select the most appropriate antonym of the given word.

Mournful

1. playful
2. laughable
3. joyous
4. humorous

Correct Option - 3

Select the antonym of the given word.

Que. 19 HOLLOW

1. narrow
2. shallow
3. solid
4. vacant

Correct Option - 3

Que. 20 Choose the one which can be substituted for the given words.

To free anything from germs

1. Cauterise
2. Sterilise
3. Antiseptic
4. Antivirus

Correct Option - 2

Que. 21 Given below are four jumbled sentences. Pick the option that gives their correct order.

- P. To stop Caesar from gaining too much power, Brutus and the conspirators kill him on the Ides of March.
- Q. Brutus and his friend Cassius lose and kill themselves, leaving Antony to rule in Rome.
- R. Mark Antony drives the conspirators out of Rome and fights them in a battle.
- S. The tale of Julius Caesar involves jealous conspirators who convince Caesar's most trusted ally Brutus to join their assassination plot against Caesar.

1. SQPR
2. SPRQ
3. QPSR
4. SQRP

Correct Option - 2

Que. 22 Sentences of a paragraph are given below in jumbled order. Arrange the sentences in the correct order to form a meaningful and coherent paragraph.

- a. Many fitness trainers encourage their clients to include these foods in their diet to build muscle.
- b. Power foods can be included in your everyday diet in a variety of ways.
- c. The secret to getting the most out of power foods is, of course, knowing how to cook them properly, buying seasonal produce and recognising your preferred flavour profile.
- d. Power foods are high in nutrients such as fibre, potassium and minerals

1. d, b, c, a
2. d, a, b, c
3. b, c, a, d
4. a, d, b, c

Correct Option - 2

Que. 23 Choose the incorrectly spelt word.

1. Advance
2. Start
3. Discribe
4. Melting

Correct Option - 3

Que. 24 Which one of the following is the misspelt word?

1. liason
2. maintenance
3. conscience
4. embarrass

Correct Option - 1

Que. 25 **Direction: Choose the part with the error.**

Each of (a) / these substances (b) / are found in India. (c) / No error (d)

1. a
2. b
3. c
4. d

Correct Option - 3

Que. 26 Find the part of the given sentence that has an error in it. If there is no error, choose 'No error'.

I never considered myself among (1)/ the most beautiful girl or in any way (2)/ a perfect candidate for a beauty pageant.(3)/ No error (4)

1. 1
2. 2
3. 3
4. 4

Correct Option - 2

Que. 27 Fill in the blank with the correct word:

Having listened to both sides, _____ judge got up to give his verdict.

1. the

2. a
3. an
4. some

Correct Option - 1

Que. 28 Direction: Choose the correct word to fill up the blanks from the alternatives.

Asvat _____ TV when her husband came.

1. Watch
2. was watching
3. is watching
4. Watched

Correct Option - 2

Que. 29 Select the correct indirect form of the given sentence.

The lawyer said, "Your case is very complicated."

1. The lawyer said that my case was very complicated.
2. The lawyer reported that my case is very complicated.
3. The lawyer said that my case had been very complicated.
4. The lawyer warned that your case was very complicated.

Correct Option - 1

Que. 30 In the following question, a sentence has been given in Active/Passive voice. Out of the four alternatives suggested, select the one which best expresses the same sentence in Passive/Active voice.

Jhanvi wears a yellow dress on Thursday.

1. A yellow dress was worn by Jhanvi on Thursday.
2. A yellow dress is worn by Jhanvi on Thursday.
3. On Thursday a yellow dress is being worn by Jhanvi.
4. On Thursday Jhanvi wears a yellow dress.

Correct Option - 2

Que. 31 The Reserve Bank of India (RBI) will launch the pilot project of Digital Rupee in the wholesale segment (e₹-W) on 1st Nov 2022. Who is the current RBI governor?

1. Shaktikanta Das
2. Raghuram Rajan
3. S. Subramaniam
4. Urjit Patel

Correct Option - 1

Que. 32 Pradhan Mantri Gramodaya Yojana was launched in _____.

- 1. 2000
- 2. 2010
- 3. 2005
- 4. 1998

Correct Option - 1

Que. 33 Match the pairs - (Directive Principles of State Policy)

	A		B
(a)	To organize village panchayat	(i)	Art. 41
(b)	To secure the improvement of public health	(ii)	Art. 40
(c)	To secure the participation of workers in management	(iii)	Art. 43A
(d)	To secure the right to work	(iv)	Art. 47

- 1. (a) - (ii), (b) - (iii), (c) - (i), (d) - (iv)
- 2. (a) - (iii), (b) - (ii), (c) - (iv), (d) - (i)
- 3. (a) - (iv), (b) - (ii), (c) - (i), (d) - (iii)
- 4. (a) - (ii), (b) - (iv), (c) - (iii), (d) - (i)

Correct Option - 4

Que. 34 Article 123 of the Constitution of India gives the power of enacting Ordinances to who among the following?

- 1. Vice-President
- 2. Prime Minister
- 3. President
- 4. Speaker of the Lok Sabha

Correct Option - 3

Que. 35 Which is the mountain/hill situated on the North-South direction of western Maharashtra?

- 1. Satpura
- 2. Shambhu Mahadev
- 3. Satmala
- 4. Sahyadri

Correct Option - 4

Que. 36 Choose the incorrect statement from the following.

- a) A total increase of 20 sq km has been recorded in forest area and tree cover in Maharashtra.
- b) Chandrapur and Gadchiroli districts have increased by 4.19 sq km and 14.12 sq km respectively.

- 1. Only a
- 2. Only b
- 3. a and b
- 4. Both are correct

Correct Option - 2

Que. 37 Identify who owns the following bibliography

- a) Who Were The Shudras?
- b) The Problem of Rupee
- c) The Untouchables
- d) Buddha and His Dhamma

- 1. Dinkarrao near
- 2. Vitthal Ramji Shinde
- 3. Mahatma Jyoti Rao Phule
- 4. Dr. Babasaheb Ambedkar

Correct Option - 4

Que. 38 Consider the following statements related to Geo-Thermal Energy in India:

- 1. In India, a geothermal energy plant has been commissioned at Manikaran in Himachal Pradesh.
- 2. It refers to the heat and electricity produced by using the heat from the exterior of the Earth.

Which of the above statement is/are correct?

- 1. 1 only
- 2. 2 only
- 3. Both 1 and 2
- 4. Neither 1 nor 2

Correct Option - 1

Que. 39 Himalaya Frontal Fault separates Shivalik from _____.

- 1. Small Himalaya
- 2. Central Himalayas
- 3. The Great Himalayas
- 4. Great Plains of India

Correct Option - 4

Que. 40 Which of the following states first receives the rain from the southwest monsoon?

1. West Bengal
2. Kerala
3. Rajasthan
4. Himachal Pradesh

Correct Option - 2

Que. 41 In which year was Rajiv Gandhi Khel Ratna Award instituted?

1. 1991-92
2. 1989-90
3. 1997-98
4. 1995-96

Correct Option - 1

Que. 42 Which of the following dance form is related with Assam?

1. Bhangra
2. Kalbeliya
3. Kathak
4. Bihu

Correct Option - 4

Que. 43 Mohiniyattam belongs to _____ in India, takes its name from the celestial enchantress Mohini.

1. Kerala
2. Madhya Pradesh
3. Maharashtra
4. Odissa

Correct Option - 1

Que. 44 There are a total of _____ tiger reserves in the state of Maharashtra.

1. 17
2. 6
3. 9
4. 10

Correct Option - 2

Que. 45 Jammu and Kashmir state has been given special status by which article of the Indian Constitution?

1. 270
2. 275
3. 280
4. 370

Correct Option - 4

Que. 46 It was Monday on 1st January 2018. What was the day of the week on 1st January 2010?

1. Tuesday
2. Thursday
3. Friday
4. Monday

Correct Option - 3

Que. 47 Pankaj is the son of Rajesh and Sapna, while Deepa is the only granddaughter of Sheela who is the mother of Prakash and Sapna. If Prakash is unmarried and is the brother of the wife of Rajesh, then how is Pankaj related to Deepa?

1. Paternal Uncle
2. Brother
3. Grandfather
4. Maternal Uncle

Correct Option - 2





Que. 48 Two cars A and B start from the same point, Car A runs 11 km south, then turns to the left and runs 19 km. Car B runs 11 km west and then turns to his right and runs 5 km. Find the shortest distance between the final positions of both the cars?

1. 36 km
2. 32 km
3. 17 km
4. 34 km

Correct Option - 4

Que. 49 A piece of paper is folded and cut as shown below in the question figure. From the given answer figure indicate how it would appear when unfolded.



1. 
2. 
3. 
4. 

Correct Option - 4

Que. 50 Select the number from among the given options that can replace the question mark (?) in the following series.

18, 27, 34, 39, 42, ?

1. 45
2. 44
3. 42
4. 43

Correct Option - 4

Que. 51 Complete the given series by finding the missing term(s):

a _ba _b _b _a _b

1. abaab
2. abbab
3. aabba
4. bbabb

Correct Option - 4

Que. 52 In a certain code language "THRIVES" is written as "SIUHRDU". How "SOULFUL" written in the same language?

1. VPTKKTE
2. VPTKETK
3. TPVKKTE

4. TNRKMV

Correct Option - 1

Que. 53 Select the figure that will come next (in place of the question mark [?]) in the following figure series.



- 1.
- 2.
- 3.
- 4.

Correct Option - 2

Que. 54 Select the related word from the given alternatives.

Bhangra : Punjab :: ? : Uttar Pradesh

- 1. Kathak
- 2. Bihu
- 3. Garba
- 4. Lavani

Correct Option - 1

Que. 55 Five students are sitting in a row. Akbar is to the left of the person sitting in the middle, but to the right of Sekar. Prakash is to the right of Deva, and Ram is to the right of Prakash. Ram is second from the person sitting in the middle. Who is the person sitting in the middle?

- 1. Sekar
- 2. Akbar
- 3. Deva

4. Ram

Correct Option - 3

Que. 56 Select the option that is true about the Statements and Conclusions given:

Statements:

All cars are engines

All engines are trams

Conclusions:

I. All cars are trams

II. All trams are engines

1. only conclusion II follows
2. only conclusion I follows
3. neither conclusion I nor conclusion II follows
4. both conclusion I and II follows

Correct Option - 2

Que. 57 $(-7)[60 \div \{6 - (-4)\}] \div [(-2)\{19 - (-2) \times (-6)\}] = ?$

1. 0
2. 2
3. 1
4. 3

Correct Option - 4

Que. 58 simplify:

$$-20 \div \frac{4}{7} \text{ of } 55\frac{1}{8} \times \frac{9}{5} - \left(\frac{6}{7} + 1\right).$$

1. $\frac{5}{7}$
2. -3
3. $-\frac{200}{567}$
4. 3

Correct Option - 2

Que. 59 The value of $12 - 3[4 + 2(1 - 4(6 - 5) + 4) - 8] \div 3$ is:

1. 10
2. 14
3. 12
4. 6

Correct Option - 2

Que. 60 What should come in place of the question mark (?) in the following question?

$$1 - [5 - \{2 + (-5 + 6 - 2) 2\}] = ?$$

1. 0
2. 2
3. -2
4. -4

Correct Option - 4



Teachingninja.in