



# Teachingninja.in



**Latest Govt Job updates**



**Private Job updates**



**Free Mock tests available**



**Visit - [teachingninja.in](https://teachingninja.in)**

# **MPSC Forest Guard**

**Memory Based Paper**  
**31 Jul, 2023**



## 60 Questions

**Que. 1** 'कल्याण' या शब्दाचा समानार्थी शब्द कोणता?

1. अशुभ
2. अमंगल
3. हित
4. अहित

Correct Option - 3

**Que. 2** पुढील शब्दांपैकी 'रान' या शब्दाचा समान अर्थ नसलेला शब्द सांगा?

1. वल्लरी
2. वन
3. विपिन
4. कानन

Correct Option - 1

**Que. 3** विरुद्धार्थी वाक्प्रचारांच्या जोड्या जुळवा.

a.	तोंडाला पाने पुसणे	i.	दात कोरून पोट भरणे
b.	पोटाला चिमटा घेणे	ii.	उद्धार करणे
c.	जमदग्नीचा अवतार असणे	iii.	सोन्याचा धूर निघणे
d.	टेंभा मिरवणे	iv.	प्रेमाचे भरते येणे

1. a - ii, b - iii, c - i, d - iv
2. a - iv, b - i, c - ii, d - iii
3. a - iv, b - ii, c - i, d - iii
4. a - ii, b - iii, c - iv, d - i

Correct Option - 4

**Que. 4** खालीलपैकी व्याकरणाच्या दृष्टीने शुद्ध शब्द-लेखन असलेला शब्द ओळखा.

1. माहिति
2. माहिती
3. माहीती
4. माहीति

Correct Option - 2

**Que. 5** खालीलपैकी व्याकरणाच्या दृष्टीने शुद्ध शब्द-लेखन असलेला शब्द ओळखा.

1. कृतिम
2. कृत्रिम
3. कुत्रीम
4. कृर्तिम

Correct Option - 2

**Que. 6** "जन पळभर म्हणतील हाय हायतू जाता राहील कार्य काय?" ह्या कवीवर्य भा. रा. तांबेंच कवितेतिल ओळींत खालीलपैकी कोणता अलंकार वापरला आहे.

1. भ्रांतिमान
2. स्वभावोक्ती
3. अर्थान्तरन्यास
4. उत्प्रेक्षा

Correct Option - 3

**Que. 7** 'पक्षी आकाशात उडाला' या वाक्यातील प्रयोग ओळखा.

1. भावे प्रयोग
2. कर्मणी प्रयोग
3. अकर्मक कर्तरी प्रयोग
4. सकर्मक कर्तरी प्रयोग

Correct Option - 3

**Que. 8** रिकाम्या जागी योग्य शब्द शोधा.

देशाच्या प्रगतीस पौर्वात्य विचारांबरोबर \_\_\_\_\_ विचारांची गरज आहे.

1. परकीय
2. स्वकीय
3. पाश्चिमात्य
4. देशाभिमानी

Correct Option - 3

**Que. 9** ' तो निजत असेल' या विधानातील काळ सांगा.

1. अपूर्ण वर्तमानकाळ
2. अपूर्ण भविष्यकाळ

3. रीति भविष्यकाळ
4. साधा भविष्यकाळ

Correct Option - 2

**Que. 10** योग्य पर्यायाची निवड करा.

मी पुण्याला \_\_\_\_\_

1. राहतो
2. राहणे
3. राहिला
4. राहतात

Correct Option - 1

**Que. 11** नाटकाच्या प्रारंभीचे स्तवन गीत - यासाठी पर्यायी शब्द निवडा.

1. अभंग
2. नांदी
3. स्वगत
4. भरतवाक्य

Correct Option - 2

**Que. 12** प्रस्तुत पर्यायांपैकी किशोर काळे लिखित प्रसिद्ध पुस्तक कोणते आहे?

1. चिकाळा
2. झोंबी
3. नाझी भस्मासुराचा उदयास्त
4. कोल्हाट्याचं पोर

Correct Option - 4

**Que. 13** 'व्यक्ती आणि वल्ली' हे पुस्तक कोणी लिहिले आहे?

1. साने गुरुजी
2. व्यंकटेश माडगुळकर
3. पु.ल.देशपांडे
4. वि.स.खांडेकर

Correct Option - 3

**Que. 14** 'मदतीसाठी आपला धनादेश कृपया खालील पत्त्या वर पाठवावा' या वाक्यात कोणते आख्यात वापरले आहे ?

1. लाख्यात
2. वाख्यात
3. ई-आख्यात
4. प्रथम ताख्यात

Correct Option - 2

---

**Que. 15** भोवळ शब्दासाठी योग्य समानार्थी शब्द निवडा.

1. परिमळ
2. आकस
3. व्याल
4. चक्कर

Correct Option - 4

---

**Que. 16** Choose the word nearest in meaning to the given word.

Contradict

1. Oppose
2. include
3. suit
4. none of these

Correct Option - 1

---

**Que. 17** **Direction:** Select the word/phrase which is closest to the opposite in meaning of the bold word or phrase.

The judge thought that the offence was **deliberate**.

1. negligible
2. unintentional
3. casual
4. legitimate

Correct Option - 2

---

**Que. 18** Select the option that can be used as a one-word substitute for the given group of words.

A speech made without preparation

1. Maiden
2. Fable
3. Extempore

4. Allegory

Correct Option - 3

---

**Que. 19** In the following question, out of the given four alternatives, select the alternative which best expresses the meaning of the Idiom/Phrase.

Beat about the bush

1. Play tricks with someone
2. Avoid talking about the main topic
3. Divide something into many parts
4. To plan an ambush

Correct Option - 2

---

**Que. 20** Select the most appropriate option to fill in the blank.

In spite of not liking his job, he has stuck to it as \_\_\_\_\_ salary is good.

1. an
2. No word required
3. the
4. a

Correct Option - 3

---

**Que. 21** **Direction: Choose the most appropriate preposition to fill in the blank.**

She succeeded \_\_\_\_\_ dint of perseverance and hard work.

1. to
2. for
3. from
4. by

Correct Option - 4

---

**Que. 22** **Choose the incorrectly spelt word.**

1. Flawless
2. Rudimentary
3. Primitive
4. Impracticable

Correct Option - 4

---

**Que. 23** Change the following sentence into Passive Voice selecting the correct option :

I cannot accept your offer

1. Your offer cannot be accepted by me
2. I cannot be accepted by your offer
3. The offer cannot be accepted by me
4. Your offer cannot be accepted

Correct Option - 1

---

**Que. 24** In the following question, a sentence has been given in Active/Passive Voice. Out of the four alternatives suggested, select the one which best expresses the same sentence in Passive/Active Voice.

Dora located the building on the map.

1. The building has been located by Dora on the map.
2. The building had been located by Dora on the map.
3. The building was located by Dora on the map.
4. The building is located by Dora on the map.

Correct Option - 3

---

**Que. 25** Read the sentence given below to find out if it contains an error. The error, if any, will be in one part of the sentence. If the sentence is error-free, select No error.

Every (A)/ students in the class (B)/ was given a notebook. (C)/ No error (D)

1. A
2. B
3. C
4. D

Correct Option - 2

---

**Que. 26** Choose the correctly punctuated sentence.

1. I can't believe we won the championship?
2. I can't believe! we won the championship.
3. I can't believe, we won the championship.
4. I can't believe we won the championship!

Correct Option - 4

---

**Que. 27** In the following question, a sentence has been given in Direct/Indirect speech. Out of the four alternatives suggested, select the one which best expresses the same sentence in Indirect/Direct speech.

Fatima said. "What are we planning for tomorrow?"

1. Fatima asked that what we have been planning for the next day.
2. Fatima told that what we were planning for the next day



3. Fatima asked what we were planning for the next day.
4. Fatima asked what we have been planning for tomorrow.

Correct Option - 3

---

**Que. 28** Rearrange the following sentence into coherent meaningful sentences.

is so fast that (A) / once in five years (B) / the knowledge multiplies (C) / the advancement of science.

(D)

1. DACB
2. ADCB
3. DCAB
4. DBAC

Correct Option - 1

---

**Que. 29** In the question given below, a set of four sentences P, Q, R & S is given, which when properly sequenced, form a coherent paragraph. Arrange the sentences in the correct order and mark the correct order as your answer.

P. Over the past few years, India's declining savings rate has been a puzzle for macroeconomists.

Q. However, fresh data from a survey shows that among urban India's working population, the young employees tend to save a higher share of their incomes than their older counterparts.

R. Also, the savings patterns of post-millennials and millennials are similar, the data show.

S. Some have blamed slow rise in household incomes for this while others have suggested that younger Indians saving less than what their parents did may be to blame.

1. SPQR
2. PSQR
3. PRSQ
4. SRQP

Correct Option - 2

---

**Que. 30** In the question given below, a set of four sentences P, Q, R & S is given, which when properly sequenced, form a coherent paragraph. Arrange the sentences in the correct order and mark the correct

P. Apart from that, the major participants threw their entire economic, industrial, and scientific capabilities behind the war effort.

Q. World War II was a global war that lasted from 1939 to 1945 and is the deadliest conflict in human history, marked by 70 to 85 million fatalities.

R. A state of total war emerged after the formation of alliances, directly involving more than 100 million people from more than 30 countries.

S. The vast majority of the world's countries, including all the great powers, eventually formed two opposing military alliances: the Allies and the Axis.

1. RPQS
2. RSPQ
3. QSRP

4. QPRS

Correct Option - 3

**Que. 31** Match the following pairs:

Literature	Writer
A. Fakeera	1. Yashwant Manohar
B. Gol Pitha	2. Baburao Bagul
C. When I was stolen Caste	3. Namdeo Dhasal
D. Tattvadnyani	4. Anna Bhau sathe

- 1. A-1, B-2, C-3, D-4
- 2. A-2, B-3, C-4, D-1
- 3. A-4, B-3, C-2, D-1
- 4. A-4, B-3, C-1, D-2

Correct Option - 3

**Que. 32** What is the relation between repo rate and reverse repo rate?

- 1. Reverse repo rate is more than Repo rate
- 2. Reverse repo rate is less than repo rate
- 3. Both are equal
- 4. There is no relation between the two

Correct Option - 2

**Que. 33** On the bank of which river was Harappa situated?

- 1. Luni
- 2. Bhogava
- 3. Indus
- 4. Ravi

Correct Option - 4

**Que. 34** Articles 324-329 of the Indian Constitution deal with which of these aspects?

- 1. Elections
- 2. Minorities' protection
- 3. Panchayats
- 4. Powers of a governor

Correct Option - 1

---

**Que. 35** The Securities and Exchange Board of India (SEBI) became an autonomous body in \_\_\_\_\_ .

1. 1988
2. 1993
3. 2001
4. 1992

Correct Option - 4

---

**Que. 36** According to 2011 census, which of the following states has the largest rural population?

1. Madhya Pradesh
2. Maharashtra
3. Punjab
4. Uttar Pradesh

Correct Option - 4

---

**Que. 37** Which of the following dams is located in Maharashtra?

1. Koyna dam
2. Bisalpur dam
3. Almatti dam
4. Mettur dam

Correct Option - 1

---

**Que. 38** The Nagarjuna Sagar Dam is located on \_\_\_\_\_ river.

1. Krishna
2. Godavari
3. Beas
4. Kaveri

Correct Option - 1

---

**Que. 39** Which state is associated with Sattariya dance?

1. Manipur
2. Assam
3. Odisha
4. Uttar Pradesh

Correct Option - 2

---

**Que. 40** Which words were added to the preamble of the Indian Constitution by the 42nd Amendment Act?

1. Socialist, Secular, Integrity
2. Sovereign, Secular, Integrity
3. Republic, Unity, Integrity
4. Democratic, Socialist, Secular

Correct Option - 1

---

**Que. 41** The "National Human Right Commission" (NHRC) consists of how many whole-time members?

1. 4 members
2. 5 members
3. 6 members
4. 7 members

Correct Option - 2

---

**Que. 42** What is the term of office of the Chairman and members of the Union Public Service Commission?

1. 5 years tenure or 65 years age
2. 3 years tenure or 62 years age
3. 6 years tenure or 65 years age
4. 6 years tenure or 62 years age

Correct Option - 3

---

**Que. 43** The National Multidimensional Poverty Index is released by the \_\_\_\_\_.

1. Ministry of Finance
2. Ministry of Social justice and Empowerment
3. Home Ministry
4. NITI Aayog

Correct Option - 4

---

**Que. 44** For each country, Global Hunger Index Values are determined by which of the following indicators?

1. Undernourishment
2. Child Mortality
3. Child Stunting
4. Child Wasting

1. 1, 2 and 4
2. 2, 3 and 4
3. 3 and 4
4. 1, 2, 3 and 4

Correct Option - 4

**Que. 45** On January 5, 2023, Odisha CM Naveen Patnaik inaugurated the state-of-the-art hockey stadium in which city?

- 1. Rourkela
- 2. Sambalpur
- 3. Bhubaneswar
- 4. Bhilai

Correct Option - 1

**Que. 46** Madhu points to a picture and says, "This is my mother's sister's daughter." How is the lady in the picture related to Madhu?

- 1. Wife
- 2. Cousin sister
- 3. Daughter in law
- 4. Daughter

Correct Option - 2

**Que. 47** Mayank's father has a brother, Prakash, whose daughter, Ritu is Kavita's mother. Sonu is Ritu's only brother. How is Sonu related to Mayank?

- 1. Nephew
- 2. Son
- 3. Cousin
- 4. Brother

Correct Option - 3

**Que. 48** Select the correct mirror image of the given combination when the mirror is placed at XY as shown.



- 1. 9P7N5L
- 2. 9P7N5L
- 3. 9P7N5L
- 4. 9P7N5L

Correct Option - 1

**Que. 49**

A piece of paper is folded and punched as shown below in the question figure. From the given answer figures, indicate how it will appear when opened.



- 1.
- 2.
- 3.
- 4.

Correct Option - 1

**Que. 50** Find the missing number in the series given below.  
20, 30, 47, 74, 114, ?

- 1. 170
- 2. 180
- 3. 210
- 4. 125

Correct Option - 1

**Que. 51** Aryan starts walking towards north to reach his school and before taking a left turn he walks 5 m. He then walks 6 m and takes a left turn and walks another 9 m. He then takes last left turn and walks 13 m and reaches his school. Now, if he is standing in front of his school's gate, then in which direction is his school facing?

- 1. North
- 2. South
- 3. East
- 4. West


Correct Option - 4

**Que. 52** P, Q, R, S, T and U are sitting on a row facing North direction, but not necessarily in the same order. Only three persons sitting between S and U. S is not sitting any corner. R is sitting immediate left to the U. Q is sitting between S and T. Who is sitting at the left corner of the row?

1. Q
2. P
3. U
4. S

Correct Option - 2

**Que. 53** Find the number of triangles in the given figure:



1. 6
2. 7
3. 8
4. 9

Correct Option - 4

**Que. 54** If '÷' means '+', '×' means '÷', '+' means '-' and '-' means '×', select the number from among the given options that can replace the question mark (?) in the following equation.

$$24 - 3 \times 2 \div 5 + ? = (6 \div 18 - 2) \times 7$$

1. 45
2. 40
3. 47
4. 35





Correct Option - 4

**Que. 55** In a certain code language, 'SOBER' is coded as '64' and 'NOSTALGIA' is coded as '107'. How will 'REPAIR' be coded in that language?

1. 83
2. 67
3. 73
4. 80

Correct Option - 3

**Que. 56** Identify the diagram that best represents the relationship among the given classes. Mammals, Whale, Elephant

1. 
2. 
3. 
4. 

Correct Option - 1

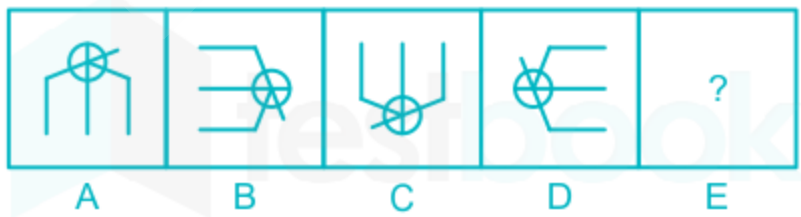
**Que. 57** A series is given with one term missing. Select the correct alternative from the given ones that will complete the series.

W, U, Q, I, ?, M.





1. O
2. R
3. Z
4. S

Correct Option - 4

**Que. 58** Choose the option that would follow next in the given figure series.

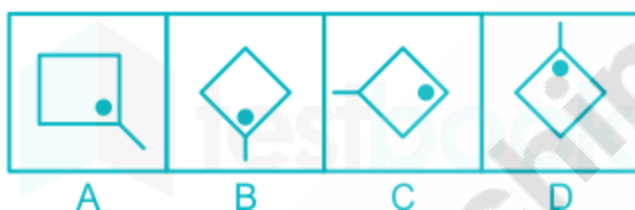




1. 
2. 
3. 
4. 

Correct Option - 4

**Que. 59** Choose the figure that is different from the other figures.



1. B
2. C
3. D
4. A

Correct Option - 2

**Que. 60** Pawan, Akash, Ritesh, Saurav, Tanmay, Umang, Vikas and Wasim are eight friends who are sitting in a merry go round facing the centre. Wasim is to the immediate left of Pawan but not next to Tanmay or Saurav. Umang is on the immediate right of Akash and Vikas is next to Tanmay. Ritesh is to the immediate left of Tanmay and to the immediate right of Umang. What is the position of Sourav?

1. Between Akash and Umang
2. Second to the right of Umang
3. Immediate left of Akash
4. Immediate left of Pawan

Correct Option - 3