



# Teachingninja.in



**Latest Govt Job updates**



**Private Job updates**



**Free Mock tests available**

**Visit - [teachingninja.in](https://teachingninja.in)**



# **Punjab Police Intelligence Assistant**

**Previous Year Paper  
10 Sept 2021 Shift 1**





# PUNJAB POLICE

Police to its last particle is duty

Exam Name	INTELLIGENCE ASSISTANT IN INTELLIGENCE CADRE OF PUNJAB POLICE AND CONSTABLE IN INVESTIGATION CADRE OF PUNJAB POLICE (PBI)-2021
Registration Number	
Application No	
Roll No	
Name of Candidate	
Exam Date	10/09/2021
Shift	9:00 AM - 12:00 PM
Subject	Intelligence Assistant In Intelligence Cadre And Constable In Investigation Cadre

Section : Intelligence Assistant In Intelligence Cadre And Constable In Investigation Cadre

**Q.1 In February 2020, which Indian public sector undertaking signed a Memorandum of Understanding (MoU) with RailTel Corporation of India for mutual co-operation in communication and defence projects?**

- Ans
- ☒ 1. East North Interconnection Company
  - ☒ 2. Indian Railway Catering and Tourism Corporation
  - ☒ 3. Bharat Sanchar Nigam Limited
  - ☒ 4. Bharat Electronics Limited

Question ID : 63068039060

Status : Answered

Chosen Option : 4

**Q.2 Which Article empowers the President to grant pardon, reprieve, remit or suspend the sentence of a person convicted of any offence?**

- Ans
- ☒ 1. Article 72
  - ☒ 2. Article 51
  - ☒ 3. Article 60
  - ☒ 4. Article 53

Question ID : 63068046090

Status : Answered

Chosen Option : 1

**Q.3 Which of the following statement is not TRUE about District Court of India?**

- Ans
- ☒ 1. The District courts of India are established by the state Governments in India.
  - ☒ 2. They administer justice in India at a District level.
  - ☒ 3. There is a separate District Court established for each and every District of India.
  - ☒ 4. These courts are under administrative control of High Court of the state.

Question ID : 63068046102

Status : Answered

Chosen Option : 3

**Q.4 Under which of the following jurisdictions does the power of the Supreme Court of India to decide disputes between the Centre and the States fall?**

- Ans
- ☒ 1. Advisory jurisdiction
  - ☒ 2. Original Jurisdiction
  - ☒ 3. Writ jurisdiction
  - ☒ 4. Appellate jurisdiction

Question ID : 63068046821

Status : Answered

Chosen Option : 2

**Q.5 According to the 2011 census, what is the sex ratio in Punjab?**

- Ans
- ☒ 1. 895 females per 1000 males
  - ☒ 2. 789 females per 1000 males
  - ☒ 3. 859 females per 1000 males
  - ☒ 4. 875 females per 1000 males

Question ID : 63068046770

Status : Answered

Chosen Option : 1

**Q.6 Which tech giant company has removed the personal loan applications in India amid safety concerns in January 2021?**

- I. Google  
II. Apple

- Ans
- ☒ 1. Both I and II
  - ☒ 2. Only I
  - ☒ 3. Only II
  - ☒ 4. Neither I nor II

Question ID : 63068046520

Status : Answered

Chosen Option : 2

Q.7 Which country has won the ATP Cup Tennis Tournament 2021?

- Ans
- ☒ 1. Australia
  - ☒ 2. Russia
  - ☒ 3. Canada
  - ☒ 4. Italy

Question ID : 63068046551  
Status : Answered  
Chosen Option : 2

Q.8 Electrostatic force obeys which law?

- Ans
- ☒ 1. Gravitational law
  - ☒ 2. Lenz's law
  - ☒ 3. Ohm's law
  - ☒ 4. Coulomb's law

Question ID : 63068046632  
Status : Answered  
Chosen Option : 4

Q.9 First Indian woman cricketer to score 10,000 International runs in one day international matches is \_\_\_\_\_.

- Ans
- ☒ 1. Smriti Mandhana
  - ☒ 2. Taniya Bhatia
  - ☒ 3. Mithali Raj
  - ☒ 4. Punam Raut

Question ID : 63068046477  
Status : Answered  
Chosen Option : 1

Q.10 In which year was the first commercial vegetable seed production unit set up in Quetta (pre-independence India)?

- Ans
- ☒ 1. 1932
  - ☒ 2. 1942
  - ☒ 3. 1938
  - ☒ 4. 1917

Question ID : 63068043412  
Status : Answered  
Chosen Option : 2

Q.11 Which of the following personalities have received Padam Vibhushan Award 2021 for Art?

- I. Sudarshan Sahoo  
II. Madhavan Nambiar

- Ans ☒ 1. Only I  
☒ 2. Neither I nor II  
☒ 3. Only II  
☒ 4. Both I and II

Question ID : 63068046462  
Status : Answered  
Chosen Option : 1

Q.12 Punjab Government has signed a Memorandum of Understanding (MoU) with Virgin Hyperloop One to explore the feasibility of running a Hyperloop between which two cities?

- Ans ☒ 1. Amritsar and Delhi  
☒ 2. Amritsar and Chandigarh  
☒ 3. Chandigarh and Pathankot  
☒ 4. Chandigarh and Delhi

Question ID : 63068046755  
Status : Answered  
Chosen Option : 2

Q.13 The first Khelo India Sports school of the North-East India has been opened in \_\_\_\_\_.

- Ans ☒ 1. Imphal  
☒ 2. Shillong  
☒ 3. Agartala  
☒ 4. Guwahati

Question ID : 63068046478  
Status : Answered  
Chosen Option : 4

Q.14 Which Schedule was added to the Constitution by the 73rd Constitutional Amendment?

- Ans ☒ 1. 11th Schedule  
☒ 2. 12th Schedule  
☒ 3. 6th Schedule  
☒ 4. 8th Schedule

Question ID : 63068046777  
Status : Answered  
Chosen Option : 1

Q.15 Which among the following fasts is for the well being and longevity of husbands?

Ans ☒ 1. Karwa chauth

☐ 2. Jhakrya

☐ 3. Bhoogay

☐ 4. Sipanji

Question ID : 63068046713

Status : Answered

Chosen Option : 1

Q.16 Which of the following is NOT a form of Indian folk painting and art style?

Ans ☐ 1. Kalighat Pat

☐ 2. Patachitra

☒ 3. Panchkuta

☐ 4. Warli

Question ID : 63068039998

Status : Answered

Chosen Option : 3

Q.17 Low frequencies cannot be transmitted to long distances. Therefore, they are superimposed on a high frequency carrier signal by a process known as\_\_\_\_\_.

Ans ☐ 1. Frequency booster

☐ 2. Demodulation

☐ 3. Amplification

☒ 4. modulation

Question ID : 63068046573

Status : Answered

Chosen Option : 3

Q.18 Which of the following is NOT a part of the Standing Committee of the Parliament?

Ans ☐ 1. Public Accounts Committee

☒ 2. Public Health Committee

☐ 3. Committee on Estimates

☐ 4. Public Undertaking Committee

Question ID : 63068046792

Status : Answered

Chosen Option : 2

Q.19 Which Article provides for the National Legal Aid Fund?

Ans ☐ 1. Article 51

☒ 2. Article 39 A

☐ 3. Article 34

☐ 4. Article 43B

Question ID : 63068046839

Status : Answered

Chosen Option : 2

Q.20 Which of the following cereal crop has highest cultivated areas in India?

- Ans ☐ 1. Gram  
☒ 2. Rice  
☐ 3. Groundnut  
☐ 4. Wheat

Question ID : 63068046601  
Status : Answered  
Chosen Option : 4

Q.21 Which Standing Committee performs the functions relating to the establishment matters and functions relating to communications, buildings, rural housing, village extensions, relief against natural calamities and allied matters and all other matters?

- Ans ☐ 1. Economic Committee  
☒ 2. General Standing committee  
☐ 3. Social Justice Committee  
☐ 4. Finance, Audit and Planning Committee

Question ID : 63068046828  
Status : Answered  
Chosen Option : 3

Q.22 Who among the following rulers of the Ilbary Dynasty was popularly known as the Darvesh King?

- Ans ☐ 1. Ghiyas-ud-din Balban  
☐ 2. Bughra Khan  
☒ 3. Nasir-ud-din Mahmud  
☐ 4. Barid-I-Mumalik

Question ID : 63068021585  
Status : Answered  
Chosen Option : 1

Q.23 The Indian Constitution was signed on \_\_\_\_\_.

- Ans ☐ 1. 26 January 1950  
☐ 2. 25 November 1949  
☒ 3. 24 January 1950  
☐ 4. 24 November 1949

Question ID : 63068039946  
Status : Answered  
Chosen Option : 4



**Q.24 Which is a traditional Punjabi gathering of peasants and farm workers to harvest crops collectively?**

- Ans
- ☒ 1. Bhoogay
  - ☒ 2. Aawatpauni
  - ☒ 3. Sipanji
  - ☒ 4. Jhakrya

Question ID : 63068046715  
Status : Answered  
Chosen Option : 1

**Q.25 Who led the Khalistan movement in early 1980s for a separate Punjab?**

- Ans
- ☒ 1. Jarnail Singh Bhindranwale
  - ☒ 2. Lala Jagat Narain
  - ☒ 3. Sanjay Gandhi
  - ☒ 4. Paramjit Singh Panjwar

Question ID : 63068046677  
Status : Answered  
Chosen Option : 1

**Q.26 The elephant festival of Jaipur is celebrated along with:**

- Ans
- ☒ 1. Christmas festival
  - ☒ 2. Janmashtami festival
  - ☒ 3. Holi festival
  - ☒ 4. Puja festival

Question ID : 63068039366  
Status : Answered  
Chosen Option : 3

**Q.27 If you are working on your personal computer on an important document and due to some reason your PC shutdowns and your data is erased, then which type of memory was storing this document?**

- Ans
- ☒ 1. EPROM
  - ☒ 2. RAM
  - ☒ 3. Hard disk
  - ☒ 4. ROM

Question ID : 63068046623  
Status : Answered  
Chosen Option : 2

**Q.28** The order of application of two separate terms is not important. - is the description of which of the following laws of Boolean algebra?

- Ans
- ☒ 1. Complement Law
  - ☒ 2. Associative Law
  - ☒ 3. Commutative Law
  - ☒ 4. Double negation Law

Question ID : 63068043418

Status : Answered

Chosen Option : 1

**Q.29** Which Amendment of the Constitution of India included Dadra and Nagar Haveli as the seventh union territory of India?

- Ans
- ☒ 1. 14th Amendment
  - ☒ 2. 12th Amendment
  - ☒ 3. 10th Amendment
  - ☒ 4. 11th Amendment

Question ID : 63068021804

Status : Answered

Chosen Option : 2

**Q.30** Ubuntu operating system is developed by:

- Ans
- ☒ 1. Microsoft
  - ☒ 2. Canonical Ltd.
  - ☒ 3. IBM
  - ☒ 4. Sun Microsystems

Question ID : 63068043404

Status : Answered

Chosen Option : 3

**Q.31** Which IPL team changed its name ahead of the 2021 IPL auction?

- Ans
- ☒ 1. Kings XI Punjab
  - ☒ 2. Royal Challengers Bangalore
  - ☒ 3. Sunrisers Hyderabad
  - ☒ 4. Chennai Super kings

Question ID : 63068046476

Status : Answered

Chosen Option : 2

Q.32 Which organisation of India released the Financial Stability Report, January 2021?

- Ans ☒ 1. Reserve Bank of India
- ☐ 2. NITI Aayog
- ☐ 3. Securities and Exchange Board of India
- ☐ 4. Insurance Regulatory and Development Authority

Question ID : 63068046517  
Status : Answered  
Chosen Option : 3

Q.33 A message signal of frequency 10 kHz and peak voltage of 1 volts is used to modulate a carrier of frequency 1 MHz and peak voltage of 2 volts. Determine modulation index?

- Ans ☐ 1. 0
- ☒ 2. 0.5
- ☐ 3. 0.1
- ☐ 4. 0.2

Question ID : 63068046575  
Status : Answered  
Chosen Option : 1

Q.34 Which of the following is incorrect about friction?

- Ans ☒ 1. Friction is an endothermic process
- ☐ 2. Friction doesn't depends on the nature of surfaces in contact
- ☐ 3. Friction can be increased by making a surface rough
- ☐ 4. Friction opposes the relative motion between two surfaces in contact

Question ID : 63068046640  
Status : Answered  
Chosen Option : 2

Q.35 In 2020, Which of the following is the largest cotton producing state in India?

- Ans ☐ 1. Uttar Pradesh
- ☐ 2. Maharashtra
- ☐ 3. West Bengal
- ☒ 4. Gujarat

Question ID : 63068039257  
Status : Answered  
Chosen Option : 2

Q.36 Which of the following is the first state to implement 50% reservation for women in Panchayati Raj Institutions?

- Ans
- ☐ 1. West Bengal
  - ☐ 2. Odisha
  - ☒ 3. Bihar
  - ☐ 4. Rajasthan

Question ID : 63068046843

Status : Answered

Chosen Option : 3

Q.37 In December 2020, which of the following became an official Olympic sport to debut at 2024 Paris Games?

- Ans
- ☐ 1. Cricket
  - ☐ 2. Bowling
  - ☒ 3. Breakdance
  - ☐ 4. Polo

Question ID : 63068046537

Status : Answered

Chosen Option : 4

Q.38 Which of the following statements is correct regarding ASEM digital platform launched in July 2020?

- I. This initiative is related to sustainable livelihood opportunities.  
II. It was launched by the Ministry of Culture.

- Ans
- ☐ 1. Only II
  - ☒ 2. Only I
  - ☐ 3. Both I and II
  - ☐ 4. Neither I nor II

Question ID : 63068046512

Status : Answered

Chosen Option : 3

Q.39 The 16th edition of 'Yudh Abhyas' took place between India and \_\_\_\_\_.

- Ans
- ☐ 1. Russia
  - ☐ 2. Indonesia
  - ☒ 3. US
  - ☐ 4. Germany

Question ID : 63068046528

Status : Answered

Chosen Option : 2

**Q.40** Tiny blood vessels called \_\_\_\_\_ let nutrients and waste products be exchanged in all your cells.

- Ans
- ☒ 1. vasculature
  - ☒ 2. capillaries
  - ☒ 3. Venules
  - ☒ 4. Arteries

Question ID : 63068046582  
Status : Answered  
Chosen Option : 2

**Q.41** The HCF of two numbers is 7340 less than their LCM. The sum of the LCM and HCF of these numbers is 7380. What is the product of these numbers?

- Ans
- ☒ 1. 147200
  - ☒ 2. 14200
  - ☒ 3. 19600
  - ☒ 4. 147600

Question ID : 63068031445  
Status : Answered  
Chosen Option : 1

**Q.42** A square has the same perimeter as that of a rectangle whose length and breadth are in the ratio of 5 : 7. What is the ratio of the area of the square to the area of the rectangle?

- Ans
- ☒ 1. 36 : 35
  - ☒ 2. 25 : 49
  - ☒ 3. 49 : 25
  - ☒ 4. 25 : 36

Question ID : 63068040671  
Status : Answered  
Chosen Option : 2

**Q.43** Find the value of the mathematical expression  $42 - [18 - \{14 - (15 - 4 \div 2 \times 2)\}]$ .

- Ans
- ☒ 1. 27
  - ☒ 2. 21
  - ☒ 3. 31
  - ☒ 4. 37

Question ID : 63068041129  
Status : Answered  
Chosen Option : 1

**Q.44** While recording the weekly attendance of a class of a School, it was observed that one entry is missing and record is speaking as follow:

Monday 36

Tuesday 36

Wednesday Not readable

Thursday 34

Friday 30

Saturday 40 and average attendance of the week 36.

What was the attendance of Wednesday?

Ans ☒ 1. 35

☒ 2. 38

☒ 3. 40

☒ 4. 37

Question ID : 63068041365

Status : Answered

Chosen Option : 3

**Q.45** A batsman scored 210 runs, which included 4 boundaries (4 runs per boundary) and 7 sixes. What percentage of his total score did he make by hitting boundaries and sixes?

Ans ☒ 1. (590/21)%

☒ 2. (570/21)%

☒ 3. (560/21)%

☒ 4. (580/21)%

Question ID : 63068042553

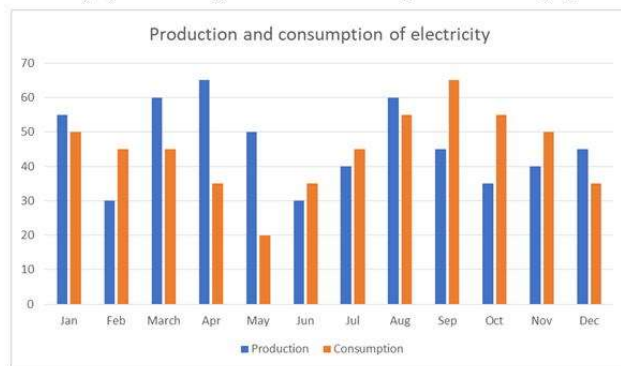
Status : Answered

Chosen Option : 4



**Q.46** Read the chart carefully and answer the questions.

This bar graph shows the production and consumption of electricity by a state in a year. (in thousand Kilo watt)



In which of the following months the production of electricity is the highest?

- Ans**
- ☒ 1. August
  - ☒ 2. January
  - ☒ 3. March
  - ☒ 4. April

Question ID : 63068041494

Status : Answered

Chosen Option : 4

**Q.47** Ramesh took a loan of Rs.1,600 with simple interest for as many years as the rate of interest. If he paid Rs.1,024 as interest at the end of the loan period, what was the rate of interest?

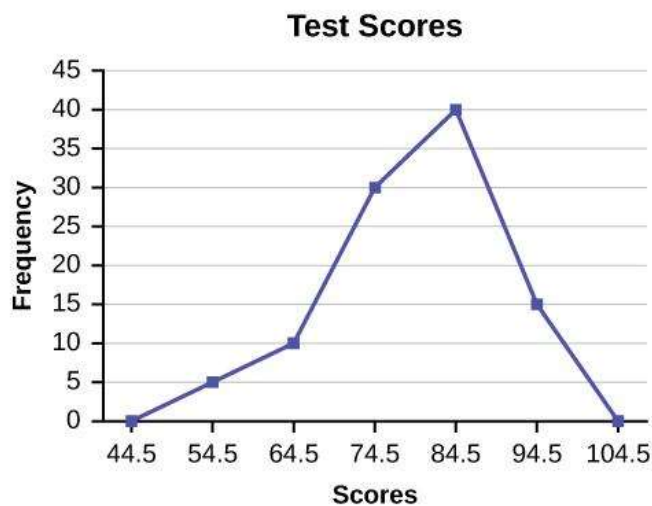
- Ans**
- ☒ 1. 5% p.a.
  - ☒ 2. 9% p.a.
  - ☒ 3. 8% p.a.
  - ☒ 4. 6% p.a.

Question ID : 63068040414

Status : Answered

Chosen Option : 4

Q.48 The given figure is a frequency polygon depicting the test scores of a group of players.



Based on the graph, find the least and highest score of the players.

- Ans
- ☒ 1. 44.5, 94.5
  - ☒ 2. 44.5, 104.5
  - ☒ 3. 54.5, 104.5
  - ☒ 4. 54.5, 94.5

Question ID : 63068041077

Status : Answered

Chosen Option : 4

Q.49 The average weight of A, B and C is 45 kg. If the average weight of A and B is 40 kg, then the weight of C is:

- Ans
- ☒ 1. 45 kg
  - ☒ 2. 55 kg
  - ☒ 3. 50 kg
  - ☒ 4. 65 kg

Question ID : 63068040570

Status : Answered

Chosen Option : 1

Q.50 The difference between the length and the breadth of a rectangle is 14 m. If its perimeter is 180 m, then its area is \_\_\_\_\_.

- Ans
- ☒ 1. 1240 m<sup>2</sup>
  - ☒ 2. 1976 m<sup>2</sup>
  - ☒ 3. 1140 m<sup>2</sup>
  - ☒ 4. 1333 m<sup>2</sup>

Question ID : 63068046988

Status : Answered

Chosen Option : 1



**Q.51** X contains a certain value. Ashmin gets the remainder 39 when he divides X by 357. What will be the remainder when X is divided by 17?

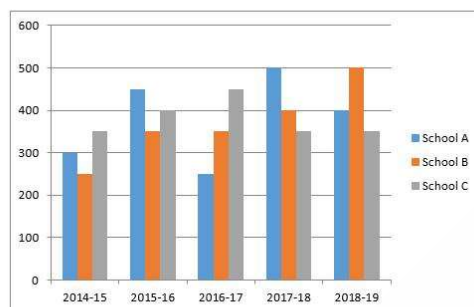
- Ans
- ☒ 1. 4
  - ☒ 2. 5
  - ☒ 3. 3
  - ☒ 4. 2

Question ID : 63068042544

Status : Answered

Chosen Option : 2

**Q.52** The bar graph shown here gives the data of number of students passing out from three different schools A, B and C over the different academic years. Study the bar graph and answer the questions.



What is the ratio of the average number of passed students of school A in the academic years 2016-2017 to 2018-2019 to the average number of passed students of school B in the same academic years?

- Ans
- ☒ 1. 23 : 25
  - ☒ 2. 1250 : 3
  - ☒ 3. 1150 : 3
  - ☒ 4. 25 : 23

Question ID : 63068031494

Status : Answered

Chosen Option : 1

**Q.53** What sum (approx.) lent out at 6.25% per annum will produce the same simple interest in 2 years as ₹ 1,500 lent out at 5% produce in 1 year 4 months?

- Ans
- ☒ 1. ₹ 300
  - ☒ 2. ₹ 800
  - ☒ 3. ₹ 3,800
  - ☒ 4. ₹ 4,000

Question ID : 63068041403

Status : Answered

Chosen Option : 3

Q.54 Find the value of '?' in the following equation.

$$\left[4 + 8^2 \times \frac{(30 \div 5)}{48}\right] - \frac{8}{4} = ?$$

- Ans
- ☐ 1. 12
  - ☒ 2. 10
  - ☐ 3. 4
  - ☐ 4. 6

Question ID : 63068040546

Status : Answered

Chosen Option : 3

Q.55 A student marks were wrongly entered as 80 instead of 60. Due to that the average marks for the class got increased by half (1/2). The number of students in the class is \_\_\_\_\_.

- Ans
- ☐ 1. 50
  - ☒ 2. 40
  - ☐ 3. 55
  - ☐ 4. 30

Question ID : 63068046985

Status : Answered

Chosen Option : 2

Q.56 By what smallest number must 10800 be multiplied, so that it becomes a perfect square?

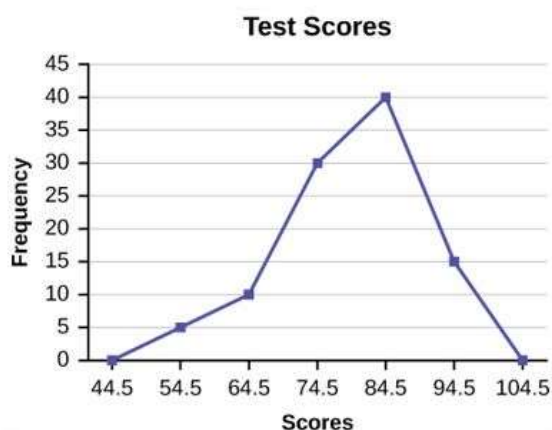
- Ans
- ☐ 1. 4
  - ☐ 2. 2
  - ☐ 3. 5
  - ☒ 4. 3

Question ID : 63068041150

Status : Answered

Chosen Option : 3

Q.57 The given figure represents data obtained from a grouped frequency distribution giving test scores of examinees.



Estimate the percentage of examinees securing 79.5 or more considering class of 79.5 – 89.5 etc.

- Ans
- ☒ 1. 50%
  - ☒ 2. 55%
  - ☒ 3. 15%
  - ☒ 4. 45%

Question ID : 63068040359

Status : Answered

Chosen Option : 4

Q.58 At what rate percent per annum will ₹69,500 will fetch a simple interest of ₹3,475 in 5 months?

- Ans
- ☒ 1. 8 %
  - ☒ 2. 6 %
  - ☒ 3. 12 %
  - ☒ 4. 1 %

Question ID : 63068041382

Status : Answered

Chosen Option : 1

Q.59 Solve using BODMAS:  $91 - [\sqrt{729} + 21 - \{10 - (9-5+4)\}]$

- Ans
- ☒ 1. 55
  - ☒ 2. 43
  - ☒ 3. 45
  - ☒ 4. 51

Question ID : 63068046848

Status : Answered

Chosen Option : 4

Q.60 Find the simple interest on Rs 4000 for a period of 3 years at the rate of 10% per annum. Also, find the amount to be paid at the end of the period?

- Ans
- ☒ 1. Rs. 400, Rs. 4400
  - ☒ 2. Rs. 1200, Rs. 5200
  - ☒ 3. Rs. 2400, Rs. 6400
  - ☒ 4. Rs. 1800, Rs. 5800

Question ID : 63068046917  
Status : Answered  
Chosen Option : 4

Q.61 The H.C.F. of 3250 and 3400 is \_\_\_\_\_.

- Ans
- ☒ 1. 50
  - ☒ 2. 20
  - ☒ 3. 25
  - ☒ 4. 30

Question ID : 63068042480  
Status : Answered  
Chosen Option : 1

Q.62 Simplify the following.

$$\frac{(5^3 - 7^3 + 8^3)}{(5^2 - 8^2 + 3^4)}$$

- Ans
- ☒ 1.  $\frac{34}{15}$
  - ☒ 2.  $\frac{19}{132}$
  - ☒ 3. 7
  - ☒ 4. 9

Question ID : 63068026927  
Status : Answered  
Chosen Option : 4

Q.63 The simple interest on a sum of money is  $\frac{9}{16}$  of the principal and the number of years is equal to the percentage rate percent of interest per annum. Find the rate and the time.

- Ans
- ☒ 1.  $15\frac{1}{2}\%$  and  $15\frac{1}{2}$  years
  - ☒ 2.  $19\frac{1}{2}\%$  and  $19\frac{1}{2}$  years
  - ☒ 3.  $7\frac{1}{4}\%$  and  $7\frac{1}{4}$  years
  - ☒ 4.  $11\frac{1}{4}\%$  and  $11\frac{1}{4}$  years

Question ID : 63068046929  
Status : Answered  
Chosen Option : 4

Q.64 A newly opened cafe has cylindrical cups of radius 3 cm and height 14 cm. If they serve half-filled cups to 200 people, how much coffee does the cafe need to brew?  
[Use  $\pi = 22/7$ ]

Ans ☒ 1. 39.6L

☐ 2. 24L

☐ 3. 26.4L

☐ 4. 32.6L

Question ID : 63068042672

Status : Answered

Chosen Option : 3

Q.65 Convert 0.959595..... into a fraction.

Ans ☐ 1.  $\frac{95}{9}$

☒ 2.  $\frac{95}{99}$

☐ 3.  $\frac{95}{999}$

☐ 4.  $\frac{95}{90}$

Question ID : 63068040534

Status : Answered

Chosen Option : 3

Q.66 In a T-20 cricket series (20 overs game), in the first 10 overs of a game of cricket, the run rate was only 5. What should be the run rate for the remaining overs so that the total score reaches 200?

Ans ☐ 1. 20

☒ 2. 15

☐ 3. 16

☐ 4. 18

Question ID : 63068041166

Status : Answered

Chosen Option : 2

Q.67 Numerical expression :  $9\frac{1}{2} - \left[7\frac{1}{2} + \{4 - (5 - 4 - 2)\}\right]$  is equivalent to

Ans ☐ 1.  $-\frac{2}{3}$

☐ 2. -1

☒ 3. 1

☐ 4.  $\frac{2}{3}$

Question ID : 63068041334

Status : Answered

Chosen Option : 3

Q.68 How many 3-digit numbers can be divided by 5?

Ans ☒ 1. 182

☒ 2. 181

☒ 3. 183

☒ 4. 180

Question ID : 63068042533

Status : Answered

Chosen Option : 4

Q.69 Arjun buys a television and sells it at a gain of 20%. If he had bought the television at 20% less and sold it for Rs.20 more he would have made a profit of 60%. The C.P of the television is \_\_\_\_\_.

Ans ☒ 1. Rs 270

☒ 2. Rs 200

☒ 3. Rs 220

☒ 4. Rs 250

Question ID : 63068042591

Status : Answered

Chosen Option : 2

Q.70 An article is purchased for Rs.350 and sold for Rs.455. Find the percentage of gain.

Ans ☒ 1. 10%

☒ 2. 20%

☒ 3. 40%

☒ 4. 30%

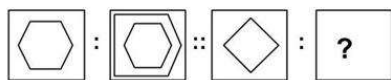
Question ID : 63068040250

Status : Answered

Chosen Option : 4



**Q.71** Select the option that is related to the third figure in the same way as the second figure is related to the first figure.



**Ans**

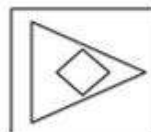
✗ 1.



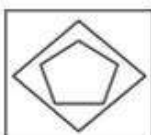
✗ 2.



✓ 3.



✗ 4.

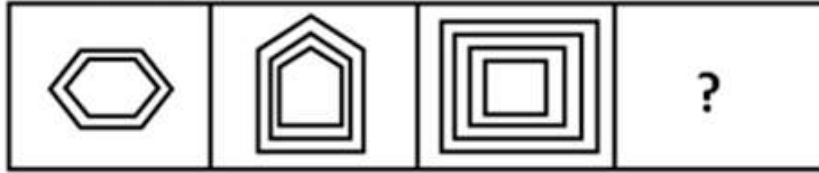


Question ID : 63068026229

Status : Answered

Chosen Option : 1

Q.72 Each of the following questions, contain four problem figures and four answer figures. Select a figure from amongst the answer figures which will continue the same series as given in the problem figures.



Ans

✓ 1.



✗ 2.



✗ 3.



✗ 4.



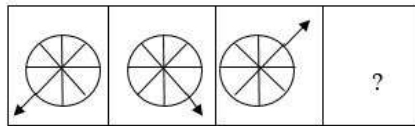
Question ID : 63068045156

Status : Answered

Chosen Option : 1

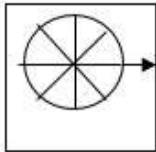


Q.73 Select the figure that can replace the question mark (?) and complete the given series.

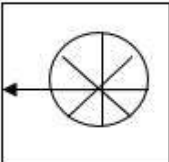


Ans

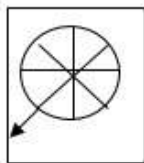
✗ 1.



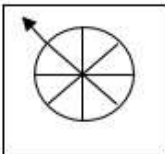
✗ 2.



✗ 3.



✓ 4.



Question ID : 63068038568

Status : Answered

Chosen Option : 4

Q.74 In a certain code language, if "DOCTOR" is coded as SPUDPE and "TAILOR" is coded as SPMJBU, then how will "FARMER" be coded as in the same coding language?

Ans ✗ 1. UEMTBH

✓ 2. SFNSBG

✗ 3. TFORBG

✗ 4. VENUCH

Question ID : 63068026129

Status : Answered

Chosen Option : 2

Q.75 Four number pairs have been given, out of which three are alike in some manner and one is different. Select the number pair that is different from the rest.

Ans ✗ 1. (98, 112)

✗ 2. (126, 144)

✓ 3. (105, 125)

✗ 4. (168, 192)

Question ID : 63068037801

Status : Answered

Chosen Option : 3

**Q.76** In the question two statements are given, followed by two conclusions, I and II. You have to consider the statement to be true even if it seems to be at variance from commonly known facts. You have to decide which of the given conclusions, if any, follows from the given statement.

Statements:

1. All pillow are bedsheet.
2. No bedsheet is a curtain.

Conclusions:

- I. Some bedsheet are pillow.
- II. No curtain is a pillow.

- Ans    ☒ 1. Both conclusion I and II follow.
- ☒ 2. Neither conclusion I nor II follow.
- ☒ 3. Only conclusion I follows.
- ☒ 4. Only conclusion II follows.

Question ID : 63068047008

Status : Answered

Chosen Option : 1

**Q.77** Which one set of letters when sequentially placed in the gaps in the given letter series shall complete it?

p i \_ x p \_ e \_ p \_ e \_

- Ans    ☒ 1. eixix
- ☒ 2. pixip
- ☒ 3. xpeip
- ☒ 4. xipex

Question ID : 63068047018

Status : Answered

Chosen Option : 2

**Q.78** Seven persons, P, Q, R, S, T, U and V are ranked (according to their height) in the class. Q is taller than P and R. R is taller than at least three persons. V is the tallest. T is not the shortest. S is taller than T but not R. P is not shorter than R. Who secures the worst rank (i.e. who is the shortest)?

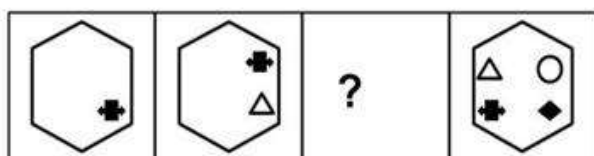
- Ans    ☒ 1. T
- ☒ 2. U
- ☒ 3. R
- ☒ 4. S

Question ID : 63068045137

Status : Answered

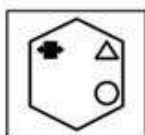
Chosen Option : 2

Q.79 Find out the figure that completes the series from the Answer Figures.

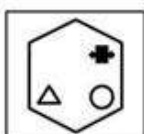


Ans

✓ 1.



✗ 2.



✗ 3.



✗ 4.



Question ID : 63068026225

Status : Answered

Chosen Option : 3

Q.80 In the following question, select the related letters from the given alternatives.

EHGI : LONP :: ? : ORQS

Ans ✓ 1. HKJL

✗ 2. HJIK

✗ 3. GHIK

✗ 4. GIHJ

Question ID : 63068044913

Status : Answered

Chosen Option : 1

Q.81 A person moves 5m towards South. Then he turns his Left and moves 7m. Then he turns left to move 12m. Then he moves 6m in his Right. In which direction he is facing?

Ans ✗ 1. South

✓ 2. East

✗ 3. West

✗ 4. North

Question ID : 63068038785

Status : Answered

Chosen Option : 4

Q.82 Which one set of letters/numbers when sequentially placed at the gaps in the given letter series shall complete it?

d c \_ a a b \_ d d c \_ a a \_ c \_

- Ans
- ☐ 1. cbccb
  - ☐ 2. cbcbc
  - ☐ 3. cbccd
  - ☒ 4. bcbbd

Question ID : 63068047033

Status : Answered

Chosen Option : 4

Q.83 Find the missing term in the given series:  
BM, EO, HQ, KS, \_

- Ans
- ☐ 1. NV
  - ☐ 2. MU
  - ☐ 3. OT
  - ☒ 4. NU

Question ID : 63068047047

Status : Answered

Chosen Option : 4

Q.84 Select the option that can replace the question mark (?) in the following series.  
125, 125, 187.5, 375, 937.5, ?

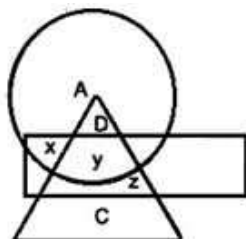
- Ans
- ☐ 1. 1335
  - ☐ 2. 1375
  - ☐ 3. 3125.5
  - ☒ 4. 2812.5

Question ID : 63068038317

Status : Answered

Chosen Option : 2

Q.85 In the following diagram, the circle represent college professors, the triangle stands for surgical specialists, and medicine specialists are represented by the rectangle. Answer the question based on the diagram.



College professors who are also medicine specialists but not a surgical specialist are represented by.

- Ans ☒ 1. x  
☒ 2. y  
☒ 3. A  
☒ 4. z

Question ID : 63068044882  
Status : Answered  
Chosen Option : 1

Q.86 In a certain code language, 'RAIN' is written as '22' and 'HER' is written as '11'. How will 'LIER' be written in that code language?

- Ans ☒ 1. 24  
☒ 2. 52  
☒ 3. 48  
☒ 4. 36

Question ID : 63068047082  
Status : Answered  
Chosen Option : 3

Q.87 Select the number that is related to the third number in the same way as the second number is related to the first number.  
 $10 : 7 :: 14 : ?$

- Ans ☒ 1. 9  
☒ 2. 8  
☒ 3. 13  
☒ 4. 12

Question ID : 63068038152  
Status : Answered  
Chosen Option : 3

Q.88 In a row of boys, Vigyan is 12<sup>th</sup> from the start and 19<sup>th</sup> from the end. In another row of boys, Atin is 14<sup>th</sup> from the start and 20<sup>th</sup> from the end. How many boys are there in both the rows together?

- Ans
- ☒ 1. 61
  - ☒ 2. 63
  - ☒ 3. 65
  - ☒ 4. 72

Question ID : 63068045102  
Status : Answered  
Chosen Option : 2

Q.89 Find the missing term in the given series:  
C, F, J, O, \_, B

- Ans
- ☒ 1. U
  - ☒ 2. T
  - ☒ 3. R
  - ☒ 4. S

Question ID : 63068047042  
Status : Answered  
Chosen Option : 1

Q.90 Identify the number that does NOT belong to the following series.  
31, 33, 37, 43, 51, 61, 71, 87, 103, 121, 141

- Ans
- ☒ 1. 51
  - ☒ 2. 121
  - ☒ 3. 71
  - ☒ 4. 33

Question ID : 63068038530  
Status : Answered  
Chosen Option : 3

Q.91 Select the letter cluster which is different from the rest in a certain manner.

- Ans
- ☒ 1. QV
  - ☒ 2. TX
  - ☒ 3. IM
  - ☒ 4. MQ

Question ID : 63068038079  
Status : Answered  
Chosen Option : 1

Q.92 Select the option that is related to the third number in the same way as the second number is related to the first number.  
 $289 : 4913 :: 441 : ?$

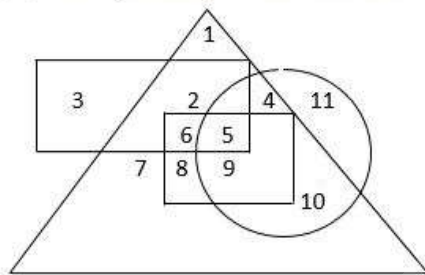
- Ans ☒ 1. 9261  
☒ 2. 8821  
☒ 3. 8721  
☒ 4. 9161

Question ID : 63068037966  
 Status : Answered  
 Chosen Option : 4

Q.93 Study the given information carefully and answer the question that follows.

In the given diagram:

- (i) The rectangle represents engineers;  
 (ii) The triangle represents professors;  
 (iii) The circle represents post graduates;  
 (iv) The square represents married.



Which of the following statements is true?

- Ans ☒ 1. All engineers are married.  
☒ 2. All married are engineers but not post graduates.  
☒ 3. Some engineers are post graduates as well as married.  
☒ 4. All engineers are post graduates.

Question ID : 63068038615  
 Status : Answered  
 Chosen Option : 3

Q.94 Raju and Nikhil are standing in a row of persons. Raju is 13th from the left side and Nikhil is 17th from the right side of the row. If they interchanged their positions Raju becomes 26th from left. Find the total number of persons.

- Ans ☒ 1. 40  
☒ 2. 42  
☒ 3. 39  
☒ 4. 41

Question ID : 63068047111  
 Status : Answered  
 Chosen Option : 4

Q.95 Which number will come in place of the question mark (?) in the given number series?

88, 64, 24, ?

- Ans
- ☐ 1. 15
  - ☐ 2. 17
  - ☒ 3. 8
  - ☐ 4. 12

Question ID : 63068026166

Status : Answered

Chosen Option : 4

Q.96 Ram walked 20 m toward north, took right turn and walked 15m. He took a right turn and walked 30 m. He took a right turn and walked 15 m. He again took a right turn and walked 3m.

How far was he from the starting point?

- Ans
- ☐ 1. 10 m
  - ☒ 2. 7 m
  - ☐ 3. 12 m
  - ☐ 4. 9 m

Question ID : 63068044989

Status : Answered

Chosen Option : 2

Q.97 Study the following arrangement carefully and answer the question given below:

'A @ B' means "A is son of B".

'A # B' means "A is husband of B".

'A % B' means "A is mother of B".

'A \$ B' means "A is sister of B".

How is Y related to M in expression "Q % M @ D @ Y @ X"?

- Ans
- ☐ 1. Father's sister
  - ☐ 2. Father
  - ☐ 3. Father's mother
  - ☒ 4. Father's Father

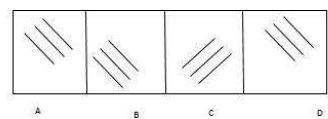
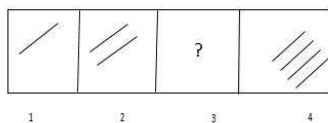
Question ID : 63068047065

Status : Answered

Chosen Option : 4



**Q.98** Select an appropriate figure from the answer figures (A, B, C, D) to replace the question mark (?) in the given series.



- Ans**
- ✓ 1. C
  - ✗ 2. B
  - ✗ 3. D
  - ✗ 4. A

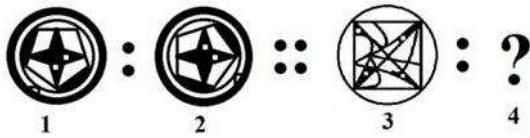
Question ID : 63068038960  
Status : Answered  
Chosen Option : 1

**Q.99** Select the option that is related to the third term on the same basis as the second term is related to the first term.  
STM : RSL :: VSF : ?

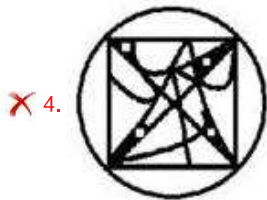
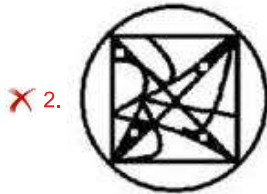
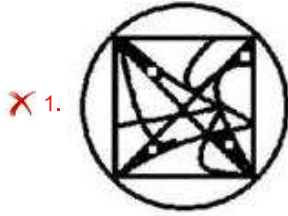
- Ans**
- ✗ 1. UQE
  - ✗ 2. WTG
  - ✓ 3. URE
  - ✗ 4. WRG

Question ID : 63068047054  
Status : Answered  
Chosen Option : 3

Q.100 Select the option that is related to Figure 3 in the same way as Figure 2 is related to Figure 1.



Ans



Question ID : 63068038202

Status : Answered

Chosen Option : 3

Q.101 In the given sentence, identify the segment which contains grammatical error.

Either John Milton or his contemporaries has written the poem in this classical way.

Ans ✗ 1. or his contemporaries

✓ 2. has written the poem

✗ 3. in this classical way

✗ 4. Either John Milton

Question ID : 63068036156

Status : Answered

Chosen Option : 2

Q.102 Which of the following spellings is correct?

- Ans
- ☐ 1. Specific
  - ☐ 2. Especial
  - ☐ 3. Specially
  - ☒ 4. Specialised

Question ID : 63068035461

Status : Answered

Chosen Option : 1

Q.103 'ਸਵੇਰ ਤੋਂ ਬੂੰਦਾਂ ਬਾਂਦੀ ਹੋ ਰਹੀ ਹੈ' ਵਾਕ ਦਾ ਸਹੀ ਅੰਗਰੇਜ਼ੀ ਅਨੁਵਾਦ ਹੈ।

- Ans
- ☐ 1. It is drizzling since morning
  - ☐ 2. It is continiosly drizzling since morning
  - ☐ 3. It has been raining since morning
  - ☒ 4. It has been drizzling since morning

Question ID : 63068047500

Status : Answered

Chosen Option : 4

Q.104 The parts of a sentence have been jumbled and labelled as P, Q, R, S. Rearrange the jumbled parts to form a meaningful sentence.

friends advised him (P) / start his own business (Q) / the young man's (R) / to give up his job and (S)

- Ans
- ☐ 1. S, P, R, Q
  - ☐ 2. R, S, Q, P
  - ☐ 3. Q, R, P, S
  - ☒ 4. R, P, S, Q

Question ID : 63068026015

Status : Answered

Chosen Option : 4

Q.105 Select the option that can best substitute the following set of words.  
The act of talking to oneself

- Ans
- ☐ 1. Utterance
  - ☐ 2. Whispering
  - ☒ 3. Soliloquy
  - ☐ 4. Daydreaming

Question ID : 63068035482

Status : Answered

Chosen Option : 3

### Comprehension:

Read the following passage and answer the questions that follow by choosing the correct option:

Union Cabinet chaired by Prime Minister Shri Narendra Modi today approved far reaching reforms in the Space sector aimed at boosting private sector participation in the entire range of space activities. The decision taken is in line with the long-term vision of the Prime Minister of transforming India and making the country self-reliant and technologically advanced.

India is among a handful of countries with advanced capabilities in the space sector. With these reforms, the sector will receive new energy and dynamism, to help the country leapfrog to the next stages of space activities.

This will not only result in an accelerated growth of this sector but will enable Indian Industry to be an important player in global space economy. With this, there is an opportunity for large-scale employment in the technology sector and India becoming a Global technology powerhouse.

#### Key Benefits:

Space sector can play a major catalytic role in the technological advancement and expansion of our Industrial base. The proposed reforms will enhance the socio-economic use of space assets and activities, including through improved access to space assets, data and facilities.

The newly created Indian National Space Promotion and Authorization Centre (IN-SPACe) will provide a level playing field for private companies to use Indian space infrastructure. It will also hand-hold, promote and guide the private industries in space activities through encouraging policies and a friendly regulatory environment.

The Public Sector Enterprise 'New Space India Limited (NSIL)' will endeavour to re-orient space activities from a 'supply driven' model to a 'demand driven' model, thereby ensuring optimum utilization of our space assets.

These reforms will allow ISRO to focus more on research and development activities, new technologies, exploration missions and human spaceflight programme. Some of the planetary exploration missions will also be opened up to private sector through an 'announcement of opportunity' mechanism.

#### SubQuestion No : 106

Q.106 Select the sentence which uses the expression 'far reaching reforms' correctly?

- Ans
- ☒ 1. The economy is bound to collapse unless far-reaching reforms is implemented
  - ☒ 2. The economics is bound to collapse unless far-reaching reforms are implemented.
  - ☒ 3. The economy is bound to collapse unless far-reaching reforms are implemented.
  - ☒ 4. The economy will be bound to collapse unless far-reaching reforms are implemented.

Question ID : 63068035677

Status : Answered

Chosen Option : 3

**Comprehension:**

Read the following passage and answer the questions that follow by choosing the correct option:

Union Cabinet chaired by Prime Minister Shri Narendra Modi today approved far reaching reforms in the Space sector aimed at boosting private sector participation in the entire range of space activities. The decision taken is in line with the long-term vision of the Prime Minister of transforming India and making the country self-reliant and technologically advanced.

India is among a handful of countries with advanced capabilities in the space sector. With these reforms, the sector will receive new energy and dynamism, to help the country leapfrog to the next stages of space activities.

This will not only result in an accelerated growth of this sector but will enable Indian Industry to be an important player in global space economy. With this, there is an opportunity for large-scale employment in the technology sector and India becoming a Global technology powerhouse.

**Key Benefits:**

Space sector can play a major catalytic role in the technological advancement and expansion of our Industrial base. The proposed reforms will enhance the socio-economic use of space assets and activities, including through improved access to space assets, data and facilities.

The newly created Indian National Space Promotion and Authorization Centre (IN-SPACe) will provide a level playing field for private companies to use Indian space infrastructure. It will also hand-hold, promote and guide the private industries in space activities through encouraging policies and a friendly regulatory environment.

The Public Sector Enterprise 'New Space India Limited (NSIL)' will endeavour to re-orient space activities from a 'supply driven' model to a 'demand driven' model, thereby ensuring optimum utilization of our space assets.

These reforms will allow ISRO to focus more on research and development activities, new technologies, exploration missions and human spaceflight programme. Some of the planetary exploration missions will also be opened up to private sector through an 'announcement of opportunity' mechanism.

**SubQuestion No : 107**

**Q.107** Space sector can play a major catalytic role in the technological advancement and expansion of our Industrial base.

In the above sentence the word 'catalytic' has been used as a/ an

- Ans    ☒ 1. adjective  
         ☐ 2. adverb  
         ☐ 3. noun  
         ☐ 4. pronoun

Question ID : 63068035678

Status : Answered

Chosen Option : 1

**Comprehension:**

Read the following passage and answer the questions that follow by choosing the correct option:

Union Cabinet chaired by Prime Minister Shri Narendra Modi today approved far reaching reforms in the Space sector aimed at boosting private sector participation in the entire range of space activities. The decision taken is in line with the long-term vision of the Prime Minister of transforming India and making the country self-reliant and technologically advanced.

India is among a handful of countries with advanced capabilities in the space sector. With these reforms, the sector will receive new energy and dynamism, to help the country leapfrog to the next stages of space activities.

This will not only result in an accelerated growth of this sector but will enable Indian Industry to be an important player in global space economy. With this, there is an opportunity for large-scale employment in the technology sector and India becoming a Global technology powerhouse.

**Key Benefits:**

Space sector can play a major catalytic role in the technological advancement and expansion of our Industrial base. The proposed reforms will enhance the socio-economic use of space assets and activities, including through improved access to space assets, data and facilities.

The newly created Indian National Space Promotion and Authorization Centre (IN-SPACe) will provide a level playing field for private companies to use Indian space infrastructure. It will also hand-hold, promote and guide the private industries in space activities through encouraging policies and a friendly regulatory environment.

The Public Sector Enterprise 'New Space India Limited (NSIL)' will endeavour to re-orient space activities from a 'supply driven' model to a 'demand driven' model, thereby ensuring optimum utilization of our space assets.

These reforms will allow ISRO to focus more on research and development activities, new technologies, exploration missions and human spaceflight programme. Some of the planetary exploration missions will also be opened up to private sector through an 'announcement of opportunity' mechanism.

**SubQuestion No : 108**

**Q.108** The new policy can be described as :

- Ans
- ☒ 1. impractical
  - ☒ 2. regressive
  - ☒ 3. progressive
  - ☒ 4. fatal

Question ID : 63068035679

Status : Answered

Chosen Option : 3



### Comprehension:

Read the following passage and answer the questions that follow by choosing the correct option:

Union Cabinet chaired by Prime Minister Shri Narendra Modi today approved far reaching reforms in the Space sector aimed at boosting private sector participation in the entire range of space activities. The decision taken is in line with the long-term vision of the Prime Minister of transforming India and making the country self-reliant and technologically advanced.

India is among a handful of countries with advanced capabilities in the space sector. With these reforms, the sector will receive new energy and dynamism, to help the country leapfrog to the next stages of space activities.

This will not only result in an accelerated growth of this sector but will enable Indian Industry to be an important player in global space economy. With this, there is an opportunity for large-scale employment in the technology sector and India becoming a Global technology powerhouse.

#### Key Benefits:

Space sector can play a major catalytic role in the technological advancement and expansion of our Industrial base. The proposed reforms will enhance the socio-economic use of space assets and activities, including through improved access to space assets, data and facilities.

The newly created Indian National Space Promotion and Authorization Centre (IN-SPACe) will provide a level playing field for private companies to use Indian space infrastructure. It will also hand-hold, promote and guide the private industries in space activities through encouraging policies and a friendly regulatory environment.

The Public Sector Enterprise 'New Space India Limited (NSIL)' will endeavour to re-orient space activities from a 'supply driven' model to a 'demand driven' model, thereby ensuring optimum utilization of our space assets.

These reforms will allow ISRO to focus more on research and development activities, new technologies, exploration missions and human spaceflight programme. Some of the planetary exploration missions will also be opened up to private sector through an 'announcement of opportunity' mechanism.

#### SubQuestion No : 109

**Q.109** The ' announcement of opportunity' mechanism in the last sentence implies that the government is planning to:

- Ans
- ☐ 1. to improve monetary gains through ISRO
  - ☐ 2. ask private sector to take over ISRO.
  - ☒ 3. provide opportunities to private sector to participate in space exploration programs
  - ☐ 4. attract young scientists to join ISRO's space exploration programs.

Question ID : 63068035680

Status : Answered

Chosen Option : 3

### Comprehension:

Read the following passage and answer the questions that follow by choosing the correct option:

Union Cabinet chaired by Prime Minister Shri Narendra Modi today approved far reaching reforms in the Space sector aimed at boosting private sector participation in the entire range of space activities. The decision taken is in line with the long-term vision of the Prime Minister of transforming India and making the country self-reliant and technologically advanced.

India is among a handful of countries with advanced capabilities in the space sector. With these reforms, the sector will receive new energy and dynamism, to help the country leapfrog to the next stages of space activities.

This will not only result in an accelerated growth of this sector but will enable Indian Industry to be an important player in global space economy. With this, there is an opportunity for large-scale employment in the technology sector and India becoming a Global technology powerhouse.

#### Key Benefits:

Space sector can play a major catalytic role in the technological advancement and expansion of our Industrial base. The proposed reforms will enhance the socio-economic use of space assets and activities, including through improved access to space assets, data and facilities.

The newly created Indian National Space Promotion and Authorization Centre (IN-SPACe) will provide a level playing field for private companies to use Indian space infrastructure. It will also hand-hold, promote and guide the private industries in space activities through encouraging policies and a friendly regulatory environment.

The Public Sector Enterprise 'New Space India Limited (NSIL)' will endeavour to re-orient space activities from a 'supply driven' model to a 'demand driven' model, thereby ensuring optimum utilization of our space assets.

These reforms will allow ISRO to focus more on research and development activities, new technologies, exploration missions and human spaceflight programme. Some of the planetary exploration missions will also be opened up to private sector through an 'announcement of opportunity' mechanism.

#### SubQuestion No : 110

Q.110 Which of the following is NOT part of PM's ideas?

- Ans
- ☒ 1. Space sector can play an important role in expanding the industrial base of the country by enhance the socio-economic use of space assets and activities.
  - ☒ 2. Enable ISRO to focus more on research and development activities, including investing time in new technologies and exploration missions.
  - ☒ 3. The private sector will be allowed to use Indian space infrastructure and play an active role in promoting space activities.
  - ☒ 4. Impose strict regulatory mechanisms on private sector so that they follow all environment friendly protocols.

Question ID : 63068035681

Status : Answered

Chosen Option : 4

Q.111 'ਮਾਨਵ' ਸ਼ਬਦ ਦਾ ਸਮਾਨਾਰਥਕ ਦੱਸੋ।

- Ans
- ☒ 1. ਰੁੱਖ
  - ☒ 2. ਪੰਛੀ
  - ☒ 3. ਮਨੁੱਖ
  - ☒ 4. ਜਾਨਵਰ

Question ID : 63068047520

Status : Answered

Chosen Option : 3



Q.112 ਹੇਠ ਲਿਖਿਆਂ ਵਿੱਚੋਂ ਸੁੱਧ ਸ਼ਬਦ ਚੁਣੋ।

- Ans
- ☐ 1. ਗੀਰਜ
  - ☐ 2. ਗਿਰਜ
  - ☒ 3. ਗਿਰਝ
  - ☐ 4. ਗੀਰਜ

Question ID : 63068047515  
Status : Answered  
Chosen Option : 2

Q.113 'ਕਿਸੇ ਪ੍ਰਤੀ ਪ੍ਰਗਟ ਕੀਤੀ ਸ਼ਰਧਾ' ਲਈ ਇਕ ਸ਼ਬਦ ਚੁਣੋ।

- Ans
- ☐ 1. ਨਿਮਰਤਾ
  - ☐ 2. ਸੰਵੇਦਨਾ
  - ☒ 3. ਸ਼ਰਧਾਂਜਲੀ
  - ☐ 4. ਖੁਸ਼ਾਮਦੀ

Question ID : 63068047540  
Status : Answered  
Chosen Option : 2

Q.114 'Aarti went to bazaar to fetch vegetables' ਵਾਕ ਦਾ ਸਹੀ ਪੰਜਾਬੀ ਅਨੁਵਾਦ ਹੈ:-

- Ans
- ☐ 1. ਸਬਜ਼ੀਆਂ ਖਰੀਦਣ ਲਈ ਆਰਤੀ ਨੂੰ ਬਾਜ਼ਾਰ ਜਾਣਾ ਪਿਆ।
  - ☐ 2. ਆਰਤੀ ਬਾਜ਼ਾਰ ਸਬਜ਼ੀਆਂ ਲੈਣ ਗਿਆ।
  - ☒ 3. ਆਰਤੀ ਸਬਜ਼ੀਆਂ ਲੈਣ ਬਾਜ਼ਾਰ ਗਈ।
  - ☐ 4. ਆਰਤੀ ਸਬਜ਼ੀ ਹਾਸਿਲ ਕਰਨ ਲਈ ਬਾਜ਼ਾਰ ਗਈ।

Question ID : 63068047562  
Status : Answered  
Chosen Option : 3

Q.115 ਵਿੱਤ ਵਿੱਚ ਰਹਿਣ ਦੀ ਤਾਕੀਦ ਕਰਦਾ ਮੁਹਾਵਰਾ ਚੁਣੋ।

- Ans
- ☒ 1. ਚਾਦਰ ਵੇਖ ਕੇ ਪੈਰ ਪਸਾਰਨਾ
  - ☐ 2. ਵਧੇਰੇ ਖਰਚ ਕਰਨਾ
  - ☐ 3. ਆਈ ਚਲਾਈ ਕਰਨਾ
  - ☐ 4. ਘਰ ਸਿਰ ਤੇ ਚੁੱਕਣਾ

Question ID : 63068047529  
Status : Answered  
Chosen Option : 1

Comprehension:

ਹੇਠ ਦਿੱਤੇ ਪੈਰੇ ਨੂੰ ਧਿਆਨ ਨਾਲ ਪੜ੍ਹੋ ਅਤੇ ਹੇਠਾਂ ਲਿਖੇ ਪ੍ਰਸ਼ਨਾਂ ਦੇ ਉਤਰ ਦਿਉ।

ਇਕ ਆਦਰਸ਼ਕ ਬੁਲਾਰਾ ਆਪਣੀ ਮਾਤ-ਭਾਸ਼ਾ ਰਾਹੀਂ ਲੋੜ ਅਨੁਸਾਰ ਹਰ ਸਥਿਤੀ ਵਿਚ ਸੂਖਮ ਤੋਂ ਸੂਖਮ ਹਾਵ-ਭਾਵ ਅਤੇ ਜੀਵਨ ਦੇ ਕਿਸੇ ਵੀ ਤਜਰਬੇ ਨੂੰ ਪ੍ਰਗਟਾਉਣ ਦੇ ਸਮਰੱਥ ਹੁੰਦਾ ਹੈ, ਕਿਉਂਕਿ ਹਰ ਭਾਸ਼ਾ ਆਪਣੇ ਆਪ ਵਿਚ ਸੁਤੰਤਰ ਅਤੇ ਸਵਾਧੀਨ ਹੋਣ ਤੇ ਨਾਤੇ ਆਪਣੇ ਜੁੱਸੇ ਵਿਚ ਇੰਨੀ ਸ਼ਕਤੀ ਸਮੇਈ ਬੈਠੀ ਹੁੰਦੀ ਹੈ ਕਿ ਉਸ ਦੇ ਬੁਲਾਰਿਆਂ ਨੂੰ ਸਵੈ-ਪ੍ਰਗਟਾਵੇ ਲਈ ਕਿਸੇ ਦੂਸਰੀ ਭਾਸ਼ਾ ਦਾ ਮੁਹਤਾਜ ਨਹੀਂ ਹੋਣਾ ਪੈਂਦਾ।

ਇਕ ਭਾਸ਼ਾ, ਜਿਸ ਦਾ ਸਰਕਾਰੀ ਕੰਮ ਕਾਜ ਅਤੇ ਵਿਦਿਆ ਦੇ ਖੇਤਰ ਵਿਚ ਪ੍ਰਯੋਗ ਹੋ ਰਿਹਾ ਹੁੰਦਾ ਹੈ, ਕਿਸੇ ਦੂਸਰੀ ਭਾਸ਼ਾ ਦੇ ਟਾਕਰੇ ਤੇ ਜਿਸ ਨੂੰ ਇਹ ਸਥਾਨ ਪ੍ਰਾਪਤ ਨਹੀਂ ਹੋਇਆ ਹੁੰਦਾ, ਵਿਕਸਤ ਮੰਨੀ ਜਾਂਦੀ ਹੈ। ਹਰ ਉਸ ਭਾਸ਼ਾ ਨੂੰ ਜਿਸ ਨੂੰ ਇਕ ਲੰਮੇ ਤੋਂ ਰਾਜ ਭਾਸ਼ਾ ਹੋਣ ਅਤੇ ਸਿੱਖਿਆ ਦੇ ਖੇਤਰ ਵਿਚ ਮਾਧਿਅਮ ਵਜੋਂ ਵਰਤੇ ਜਾਣ ਦਾ ਅਵਸਰ ਪ੍ਰਾਪਤ ਹੋ ਚੁੱਕਾ ਹੈ, ਉਨਤ ਭਾਸ਼ਾਵਾਂ ਦੀ ਕਤਾਰ ਵਿਚ ਜਾ ਖੜੀ ਹੁੰਦੀ ਹੈ। ਅਜਿਹੀ ਭਾਸ਼ਾ ਨਾਲ ਸਬੰਧਤ ਹਰ ਭਾਂਤ ਦੀ ਸਮੱਗਰੀ ਬੁਲਾਰਿਆਂ ਨੂੰ ਲੋੜ ਅਨੁਸਾਰ ਪ੍ਰਾਪਤ ਹੁੰਦੀ ਹੈ। ਪਰ ਕਿਸੇ ਵੀ ਅਜਿਹੀ ਹੋਰ ਭਾਸ਼ਾ ਦੀਆਂ ਲੋੜਾਂ, ਜਿਸ ਨੂੰ ਰਾਜ-ਭਾਸ਼ਾ ਦਾ ਦਰਜਾ ਵੀ ਅਤੇ ਸਿੱਖਿਆ ਦੇ ਖੇਤਰ ਵਿਚ ਮਾਧਿਅਮ ਵਜੋਂ ਵਰਤੇ ਜਾਣ ਦਾ ਅਵਸਰ ਵੀ ਨਵਾਂ-ਨਵਾਂ ਪ੍ਰਾਪਤ ਹੋਇਆ ਹੋਵੇ, ਜਿਵੇਂ ਕਿ ਪੰਜਾਬੀ ਨੂੰ ਹੋਇਆ ਹੈ, ਬਹੁਤ ਜ਼ਿਆਦਾ ਹੁੰਦੀਆਂ ਹਨ। ਅਜਿਹੀ ਭਾਸ਼ਾ ਦੀਆਂ ਇਹ ਲੋੜਾਂ ਹਵਾਲਾ ਕੇਸ਼, ਤਕਨੀਕੀ ਸ਼ਬਦਾਵਲੀ, ਸਰਬੰਗੀ ਵਿਆਕਰਨ ਰਚ ਕੇ ਸਧਾਰਨ ਸ਼ਬਦਾਂ ਨੂੰ ਵਿਸ਼ੇਸ਼ ਅਰਥ ਪ੍ਰਦਾਨ ਕਰਕੇ ਅਤੇ ਲੋੜ ਅਨੁਸਾਰ ਦੂਜੀਆਂ ਭਾਸ਼ਾਵਾਂ ਵਿਚੋਂ ਬੁਨਿਆਦੀ ਪੁਸਤਕਾਂ ਦਾ ਅਨੁਵਾਦ ਕਰਕੇ ਪੂਰੀਆਂ ਕਰੀਆਂ ਜਾਂਦੀਆਂ ਹਨ।

SubQuestion No : 116

Q.116 ਉਪਰੋਕਤ ਪੈਰੇ ਦਾ ਢੁੱਕਵਾਂ ਸਿਰਲੇਖ ਹੈ?

- Ans
- ☒ 1. ਭਾਸ਼ਾ ਦੀ ਸਥਿਤੀ
  - ☒ 2. ਵਿਦੇਸ਼ੀ ਭਾਸ਼ਾ
  - ☒ 3. ਉਨਤ ਭਾਸ਼ਾ ਦੇ ਮਾਪਦੰਡ
  - ☒ 4. ਸਰਕਾਰੀ ਕੰਮ ਕਾਜ ਦੀ ਭਾਸ਼ਾ

Question ID : 63068047589

Status : Answered

Chosen Option : 3

Comprehension:

ਹੇਠ ਦਿੱਤੇ ਪੈਰੇ ਨੂੰ ਧਿਆਨ ਨਾਲ ਪੜ੍ਹੋ ਅਤੇ ਹੇਠਾਂ ਲਿਖੇ ਪ੍ਰਸ਼ਨਾਂ ਦੇ ਉਤਰ ਦਿਉ।

ਇਕ ਆਦਰਸ਼ਕ ਬੁਲਾਰਾ ਆਪਣੀ ਮਾਤ-ਭਾਸ਼ਾ ਰਾਹੀਂ ਲੋੜ ਅਨੁਸਾਰ ਹਰ ਸਥਿਤੀ ਵਿਚ ਸੂਖਮ ਤੋਂ ਸੂਖਮ ਹਾਵ-ਭਾਵ ਅਤੇ ਜੀਵਨ ਦੇ ਕਿਸੇ ਵੀ ਤਜਰਬੇ ਨੂੰ ਪ੍ਰਗਟਾਉਣ ਦੇ ਸਮਰੱਥ ਹੁੰਦਾ ਹੈ, ਕਿਉਂਕਿ ਹਰ ਭਾਸ਼ਾ ਆਪਣੇ ਆਪ ਵਿਚ ਸੁਤੰਤਰ ਅਤੇ ਸਵਾਧੀਨ ਹੋਣ ਤੇ ਨਾਤੇ ਆਪਣੇ ਜੁੱਸੇ ਵਿਚ ਇੰਨੀ ਸ਼ਕਤੀ ਸਮੇਈ ਬੈਠੀ ਹੁੰਦੀ ਹੈ ਕਿ ਉਸ ਦੇ ਬੁਲਾਰਿਆਂ ਨੂੰ ਸਵੈ-ਪ੍ਰਗਟਾਵੇ ਲਈ ਕਿਸੇ ਦੂਸਰੀ ਭਾਸ਼ਾ ਦਾ ਮੁਹਤਾਜ ਨਹੀਂ ਹੋਣਾ ਪੈਂਦਾ।

ਇਕ ਭਾਸ਼ਾ, ਜਿਸ ਦਾ ਸਰਕਾਰੀ ਕੰਮ ਕਾਜ ਅਤੇ ਵਿਦਿਆ ਦੇ ਖੇਤਰ ਵਿਚ ਪ੍ਰਯੋਗ ਹੋ ਰਿਹਾ ਹੁੰਦਾ ਹੈ, ਕਿਸੇ ਦੂਸਰੀ ਭਾਸ਼ਾ ਦੇ ਟਾਕਰੇ ਤੇ ਜਿਸ ਨੂੰ ਇਹ ਸਥਾਨ ਪ੍ਰਾਪਤ ਨਹੀਂ ਹੋਇਆ ਹੁੰਦਾ, ਵਿਕਸਤ ਮੰਨੀ ਜਾਂਦੀ ਹੈ। ਹਰ ਉਸ ਭਾਸ਼ਾ ਨੂੰ ਜਿਸ ਨੂੰ ਇਕ ਲੰਮੇ ਤੋਂ ਰਾਜ ਭਾਸ਼ਾ ਹੋਣ ਅਤੇ ਸਿੱਖਿਆ ਦੇ ਖੇਤਰ ਵਿਚ ਮਾਧਿਅਮ ਵਜੋਂ ਵਰਤੇ ਜਾਣ ਦਾ ਅਵਸਰ ਪ੍ਰਾਪਤ ਹੋ ਚੁੱਕਾ ਹੈ, ਉਨਤ ਭਾਸ਼ਾਵਾਂ ਦੀ ਕਤਾਰ ਵਿਚ ਜਾ ਖੜੀ ਹੁੰਦੀ ਹੈ। ਅਜਿਹੀ ਭਾਸ਼ਾ ਨਾਲ ਸਬੰਧਤ ਹਰ ਭਾਂਤ ਦੀ ਸਮੱਗਰੀ ਬੁਲਾਰਿਆਂ ਨੂੰ ਲੋੜ ਅਨੁਸਾਰ ਪ੍ਰਾਪਤ ਹੁੰਦੀ ਹੈ। ਪਰ ਕਿਸੇ ਵੀ ਅਜਿਹੀ ਹੋਰ ਭਾਸ਼ਾ ਦੀਆਂ ਲੋੜਾਂ, ਜਿਸ ਨੂੰ ਰਾਜ-ਭਾਸ਼ਾ ਦਾ ਦਰਜਾ ਵੀ ਅਤੇ ਸਿੱਖਿਆ ਦੇ ਖੇਤਰ ਵਿਚ ਮਾਧਿਅਮ ਵਜੋਂ ਵਰਤੇ ਜਾਣ ਦਾ ਅਵਸਰ ਵੀ ਨਵਾਂ-ਨਵਾਂ ਪ੍ਰਾਪਤ ਹੋਇਆ ਹੋਵੇ, ਜਿਵੇਂ ਕਿ ਪੰਜਾਬੀ ਨੂੰ ਹੋਇਆ ਹੈ, ਬਹੁਤ ਜ਼ਿਆਦਾ ਹੁੰਦੀਆਂ ਹਨ। ਅਜਿਹੀ ਭਾਸ਼ਾ ਦੀਆਂ ਇਹ ਲੋੜਾਂ ਹਵਾਲਾ ਕੇਸ਼, ਤਕਨੀਕੀ ਸ਼ਬਦਾਵਲੀ, ਸਰਬੰਗੀ ਵਿਆਕਰਨ ਰਚ ਕੇ ਸਧਾਰਨ ਸ਼ਬਦਾਂ ਨੂੰ ਵਿਸ਼ੇਸ਼ ਅਰਥ ਪ੍ਰਦਾਨ ਕਰਕੇ ਅਤੇ ਲੋੜ ਅਨੁਸਾਰ ਦੂਜੀਆਂ ਭਾਸ਼ਾਵਾਂ ਵਿਚੋਂ ਬੁਨਿਆਦੀ ਪੁਸਤਕਾਂ ਦਾ ਅਨੁਵਾਦ ਕਰਕੇ ਪੂਰੀਆਂ ਕਰੀਆਂ ਜਾਂਦੀਆਂ ਹਨ।

SubQuestion No : 117

Q.117 ਆਦਰਸ਼ਕ ਬੁਲਾਰੇ ਦੀ ਵਿਲੱਖਣਤਾ ਕੀ ਹੁੰਦੀ ਹੈ?

- Ans
- ☒ 1. ਆਦਰਸ਼ਾਂ ਬਾਰੇ ਬੋਲਣਾ
  - ☒ 2. ਮਾਤ ਭਾਸ਼ਾ ਰਾਹੀਂ ਸੂਖਮ ਪ੍ਰਗਟਾਵਾ ਕਰਨ ਦੇ ਯੋਗ
  - ☒ 3. ਸਭ ਤੋਂ ਵੱਧ ਬੋਲਣਾ
  - ☒ 4. ਬਹੁਤ ਭਾਸ਼ਾਵਾਂ ਦੀ ਜਾਣਕਾਰੀ

Question ID : 63068047590

Status : Answered

Chosen Option : 2



Comprehension:

ਹੇਠ ਦਿੱਤੇ ਪੈਰੇ ਨੂੰ ਧਿਆਨ ਨਾਲ ਪੜ੍ਹੋ ਅਤੇ ਹੇਠਾਂ ਲਿਖੇ ਪ੍ਰਸ਼ਨਾਂ ਦੇ ਉਤਰ ਦਿਉ।

ਇਕ ਆਦਰਸ਼ਕ ਬੁਲਾਰਾ ਆਪਣੀ ਮਾਤ-ਭਾਸ਼ਾ ਰਾਹੀਂ ਲੋੜ ਅਨੁਸਾਰ ਹਰ ਸਥਿਤੀ ਵਿਚ ਸੂਖਮ ਤੋਂ ਸੂਖਮ ਹਾਵ-ਭਾਵ ਅਤੇ ਜੀਵਨ ਦੇ ਕਿਸੇ ਵੀ ਤਜਰਬੇ ਨੂੰ ਪ੍ਰਗਟਾਉਣ ਦੇ ਸਮਰੱਥ ਹੁੰਦਾ ਹੈ, ਕਿਉਂਕਿ ਹਰ ਭਾਸ਼ਾ ਆਪਣੇ ਆਪ ਵਿਚ ਸੁਤੰਤਰ ਅਤੇ ਸਵਾਧੀਨ ਹੋਣ ਤੇ ਨਾਤੇ ਆਪਣੇ ਜੁੱਸੇ ਵਿਚ ਇੰਨੀ ਸ਼ਕਤੀ ਸਮੇਈ ਬੈਠੀ ਹੁੰਦੀ ਹੈ ਕਿ ਉਸ ਦੇ ਬੁਲਾਰਿਆਂ ਨੂੰ ਸਵੈ-ਪ੍ਰਗਟਾਵੇ ਲਈ ਕਿਸੇ ਦੂਸਰੀ ਭਾਸ਼ਾ ਦਾ ਮੁਹਤਾਜ ਨਹੀਂ ਹੋਣਾ ਪੈਂਦਾ।

ਇਕ ਭਾਸ਼ਾ, ਜਿਸ ਦਾ ਸਰਕਾਰੀ ਕੰਮ ਕਾਜ ਅਤੇ ਵਿਦਿਆ ਦੇ ਖੇਤਰ ਵਿਚ ਪ੍ਰਯੋਗ ਹੋ ਰਿਹਾ ਹੁੰਦਾ ਹੈ, ਕਿਸੇ ਦੂਸਰੀ ਭਾਸ਼ਾ ਦੇ ਟਾਕਰੇ ਤੇ ਜਿਸ ਨੂੰ ਇਹ ਸਥਾਨ ਪ੍ਰਾਪਤ ਨਹੀਂ ਹੋਇਆ ਹੁੰਦਾ, ਵਿਕਸਤ ਮੰਨੀ ਜਾਂਦੀ ਹੈ। ਹਰ ਉਸ ਭਾਸ਼ਾ ਨੂੰ ਜਿਸ ਨੂੰ ਇਕ ਲੰਮੇ ਤੋਂ ਰਾਜ ਭਾਸ਼ਾ ਹੋਣ ਅਤੇ ਸਿੱਖਿਆ ਦੇ ਖੇਤਰ ਵਿਚ ਮਾਧਿਅਮ ਵਜੋਂ ਵਰਤੇ ਜਾਣ ਦਾ ਅਵਸਰ ਪ੍ਰਾਪਤ ਹੋ ਚੁੱਕਾ ਹੈ, ਉਨਤ ਭਾਸ਼ਾਵਾਂ ਦੀ ਕਤਾਰ ਵਿਚ ਜਾ ਖੜੀ ਹੁੰਦੀ ਹੈ। ਅਜਿਹੀ ਭਾਸ਼ਾ ਨਾਲ ਸਬੰਧਤ ਹਰ ਭਾਂਤ ਦੀ ਸਮੱਗਰੀ ਬੁਲਾਰਿਆਂ ਨੂੰ ਲੋੜ ਅਨੁਸਾਰ ਪ੍ਰਾਪਤ ਹੁੰਦੀ ਹੈ। ਪਰ ਕਿਸੇ ਵੀ ਅਜਿਹੀ ਹੋਰ ਭਾਸ਼ਾ ਦੀਆਂ ਲੋੜਾਂ, ਜਿਸ ਨੂੰ ਰਾਜ-ਭਾਸ਼ਾ ਦਾ ਦਰਜਾ ਵੀ ਅਤੇ ਸਿੱਖਿਆ ਦੇ ਖੇਤਰ ਵਿਚ ਮਾਧਿਅਮ ਵਜੋਂ ਵਰਤੇ ਜਾਣ ਦਾ ਅਵਸਰ ਵੀ ਨਵਾਂ-ਨਵਾਂ ਪ੍ਰਾਪਤ ਹੋਇਆ ਹੋਵੇ, ਜਿਵੇਂ ਕਿ ਪੰਜਾਬੀ ਨੂੰ ਹੋਇਆ ਹੈ, ਬਹੁਤ ਜ਼ਿਆਦਾ ਹੁੰਦੀਆਂ ਹਨ। ਅਜਿਹੀ ਭਾਸ਼ਾ ਦੀਆਂ ਇਹ ਲੋੜਾਂ ਹਵਾਲਾ ਕੇਸ਼, ਤਕਨੀਕੀ ਸ਼ਬਦਾਵਲੀ, ਸਰਬੰਗੀ ਵਿਆਕਰਨ ਰਚ ਕੇ ਸਧਾਰਨ ਸ਼ਬਦਾਂ ਨੂੰ ਵਿਸ਼ੇਸ਼ ਅਰਥ ਪ੍ਰਦਾਨ ਕਰਕੇ ਅਤੇ ਲੋੜ ਅਨੁਸਾਰ ਦੂਜੀਆਂ ਭਾਸ਼ਾਵਾਂ ਵਿਚੋਂ ਬੁਨਿਆਦੀ ਪੁਸਤਕਾਂ ਦਾ ਅਨੁਵਾਦ ਕਰਕੇ ਪੂਰੀਆਂ ਕਰੀਆਂ ਜਾਂਦੀਆਂ ਹਨ।

SubQuestion No : 118

Q.118 ਵਿਕਸਿਤ ਭਾਸ਼ਾ ਕਿਸ ਨੂੰ ਮੰਨਿਆ ਜਾਂਦਾ ਹੈ?

- Ans
- ✓ 1. ਜੋ ਰਾਜ ਤੇ ਵਿਦਿਆ ਦੀ ਭਾਸ਼ਾ ਹੋਵੇ
  - ✗ 2. ਜਿਸ ਨੂੰ ਬੋਲਣ ਵਾਲੇ ਬਹੁਤ ਵਿਅਕਤੀ ਹੋਣ
  - ✗ 3. ਜਿਸ ਦੀ ਜਾਣਕਾਰੀ ਹਰੇਕ ਨੂੰ ਹੋਵੇ
  - ✗ 4. ਜੋ ਭਾਸ਼ਾ ਪਿੰਡਾਂ ਵਿਚ ਬੋਲੀ ਜਾਵੇ

Question ID : 63068047591

Status : Answered

Chosen Option : 1

Comprehension:

ਹੇਠ ਦਿੱਤੇ ਪੈਰੇ ਨੂੰ ਧਿਆਨ ਨਾਲ ਪੜ੍ਹੋ ਅਤੇ ਹੇਠਾਂ ਲਿਖੇ ਪ੍ਰਸ਼ਨਾਂ ਦੇ ਉਤਰ ਦਿਉ।

ਇਕ ਆਦਰਸ਼ਕ ਬੁਲਾਰਾ ਆਪਣੀ ਮਾਤ-ਭਾਸ਼ਾ ਰਾਹੀਂ ਲੋੜ ਅਨੁਸਾਰ ਹਰ ਸਥਿਤੀ ਵਿਚ ਸੂਖਮ ਤੋਂ ਸੂਖਮ ਹਾਵ-ਭਾਵ ਅਤੇ ਜੀਵਨ ਦੇ ਕਿਸੇ ਵੀ ਤਜਰਬੇ ਨੂੰ ਪ੍ਰਗਟਾਉਣ ਦੇ ਸਮਰੱਥ ਹੁੰਦਾ ਹੈ, ਕਿਉਂਕਿ ਹਰ ਭਾਸ਼ਾ ਆਪਣੇ ਆਪ ਵਿਚ ਸੁਤੰਤਰ ਅਤੇ ਸਵਾਧੀਨ ਹੋਣ ਤੇ ਨਾਤੇ ਆਪਣੇ ਜੁੱਸੇ ਵਿਚ ਇੰਨੀ ਸ਼ਕਤੀ ਸਮੇਈ ਬੈਠੀ ਹੁੰਦੀ ਹੈ ਕਿ ਉਸ ਦੇ ਬੁਲਾਰਿਆਂ ਨੂੰ ਸਵੈ-ਪ੍ਰਗਟਾਵੇ ਲਈ ਕਿਸੇ ਦੂਸਰੀ ਭਾਸ਼ਾ ਦਾ ਮੁਹਤਾਜ ਨਹੀਂ ਹੋਣਾ ਪੈਂਦਾ।

ਇਕ ਭਾਸ਼ਾ, ਜਿਸ ਦਾ ਸਰਕਾਰੀ ਕੰਮ ਕਾਜ ਅਤੇ ਵਿਦਿਆ ਦੇ ਖੇਤਰ ਵਿਚ ਪ੍ਰਯੋਗ ਹੋ ਰਿਹਾ ਹੁੰਦਾ ਹੈ, ਕਿਸੇ ਦੂਸਰੀ ਭਾਸ਼ਾ ਦੇ ਟਾਕਰੇ ਤੇ ਜਿਸ ਨੂੰ ਇਹ ਸਥਾਨ ਪ੍ਰਾਪਤ ਨਹੀਂ ਹੋਇਆ ਹੁੰਦਾ, ਵਿਕਸਤ ਮੰਨੀ ਜਾਂਦੀ ਹੈ। ਹਰ ਉਸ ਭਾਸ਼ਾ ਨੂੰ ਜਿਸ ਨੂੰ ਇਕ ਲੰਮੇ ਤੋਂ ਰਾਜ ਭਾਸ਼ਾ ਹੋਣ ਅਤੇ ਸਿੱਖਿਆ ਦੇ ਖੇਤਰ ਵਿਚ ਮਾਧਿਅਮ ਵਜੋਂ ਵਰਤੇ ਜਾਣ ਦਾ ਅਵਸਰ ਪ੍ਰਾਪਤ ਹੋ ਚੁੱਕਾ ਹੈ, ਉਨਤ ਭਾਸ਼ਾਵਾਂ ਦੀ ਕਤਾਰ ਵਿਚ ਜਾ ਖੜੀ ਹੁੰਦੀ ਹੈ। ਅਜਿਹੀ ਭਾਸ਼ਾ ਨਾਲ ਸਬੰਧਤ ਹਰ ਭਾਂਤ ਦੀ ਸਮੱਗਰੀ ਬੁਲਾਰਿਆਂ ਨੂੰ ਲੋੜ ਅਨੁਸਾਰ ਪ੍ਰਾਪਤ ਹੁੰਦੀ ਹੈ। ਪਰ ਕਿਸੇ ਵੀ ਅਜਿਹੀ ਹੋਰ ਭਾਸ਼ਾ ਦੀਆਂ ਲੋੜਾਂ, ਜਿਸ ਨੂੰ ਰਾਜ-ਭਾਸ਼ਾ ਦਾ ਦਰਜਾ ਵੀ ਅਤੇ ਸਿੱਖਿਆ ਦੇ ਖੇਤਰ ਵਿਚ ਮਾਧਿਅਮ ਵਜੋਂ ਵਰਤੇ ਜਾਣ ਦਾ ਅਵਸਰ ਵੀ ਨਵਾਂ-ਨਵਾਂ ਪ੍ਰਾਪਤ ਹੋਇਆ ਹੋਵੇ, ਜਿਵੇਂ ਕਿ ਪੰਜਾਬੀ ਨੂੰ ਹੋਇਆ ਹੈ, ਬਹੁਤ ਜ਼ਿਆਦਾ ਹੁੰਦੀਆਂ ਹਨ। ਅਜਿਹੀ ਭਾਸ਼ਾ ਦੀਆਂ ਇਹ ਲੋੜਾਂ ਹਵਾਲਾ ਕੇਸ਼, ਤਕਨੀਕੀ ਸ਼ਬਦਾਵਲੀ, ਸਰਬੰਗੀ ਵਿਆਕਰਨ ਰਚ ਕੇ ਸਧਾਰਨ ਸ਼ਬਦਾਂ ਨੂੰ ਵਿਸ਼ੇਸ਼ ਅਰਥ ਪ੍ਰਦਾਨ ਕਰਕੇ ਅਤੇ ਲੋੜ ਅਨੁਸਾਰ ਦੂਜੀਆਂ ਭਾਸ਼ਾਵਾਂ ਵਿਚੋਂ ਬੁਨਿਆਦੀ ਪੁਸਤਕਾਂ ਦਾ ਅਨੁਵਾਦ ਕਰਕੇ ਪੂਰੀਆਂ ਕਰੀਆਂ ਜਾਂਦੀਆਂ ਹਨ।

SubQuestion No : 119

Q.119 ਕਿਹੜੀ ਭਾਸ਼ਾ ਦੀਆਂ ਲੋੜਾਂ ਜ਼ਿਆਦਾ ਹੁੰਦੀਆਂ ਹਨ?

Ans

- ☒ 1. ਜੋ ਬਹੁਤ ਪੁਰਾਤਨ ਹੋਵੇ
- ☒ 2. ਜੋ ਬੋਲਚਾਲ ਦਾ ਲਾਜ਼ਮੀ ਮਾਧਿਅਮ ਹੋਵੇ
- ☒ 3. ਜਿਸ ਨੂੰ ਹਾਲ ਵਿਚ ਹੀ ਰਾਜ ਭਾਸ਼ਾ ਅਤੇ ਸਿੱਖਿਆ ਦੇ ਮਾਧਿਅਮ ਦਾ ਦਰਜਾ ਮਿਲਿਆ ਹੋਵੇ
- ☒ 4. ਜੋ ਨਵੀਂ ਹੋਵੇ

Question ID : 63068047592

Status : Answered

Chosen Option : 3

Comprehension:

ਹੇਠ ਦਿੱਤੇ ਪੈਰੇ ਨੂੰ ਧਿਆਨ ਨਾਲ ਪੜ੍ਹੋ ਅਤੇ ਹੇਠਾਂ ਲਿਖੇ ਪ੍ਰਸ਼ਨਾਂ ਦੇ ਉਤਰ ਦਿਉ।

ਇਕ ਆਦਰਸ਼ਕ ਬੁਲਾਰਾ ਆਪਣੀ ਮਾਤ-ਭਾਸ਼ਾ ਰਾਹੀਂ ਲੋੜ ਅਨੁਸਾਰ ਹਰ ਸਥਿਤੀ ਵਿਚ ਸੂਖਮ ਤੋਂ ਸੂਖਮ ਹਾਵ-ਭਾਵ ਅਤੇ ਜੀਵਨ ਦੇ ਕਿਸੇ ਵੀ ਤਜਰਬੇ ਨੂੰ ਪ੍ਰਗਟਾਉਣ ਦੇ ਸਮਰੱਥ ਹੁੰਦਾ ਹੈ, ਕਿਉਂਕਿ ਹਰ ਭਾਸ਼ਾ ਆਪਣੇ ਆਪ ਵਿਚ ਸੁਤੰਤਰ ਅਤੇ ਸਵਾਧੀਨ ਹੋਣ ਤੇ ਨਾਤੇ ਆਪਣੇ ਜੁੱਸੇ ਵਿਚ ਇੰਨੀ ਸ਼ਕਤੀ ਸਮੇਈ ਬੈਠੀ ਹੁੰਦੀ ਹੈ ਕਿ ਉਸ ਦੇ ਬੁਲਾਰਿਆਂ ਨੂੰ ਸਵੈ-ਪ੍ਰਗਟਾਵੇ ਲਈ ਕਿਸੇ ਦੂਸਰੀ ਭਾਸ਼ਾ ਦਾ ਮੁਹਤਾਜ ਨਹੀਂ ਹੋਣਾ ਪੈਂਦਾ।

ਇਕ ਭਾਸ਼ਾ, ਜਿਸ ਦਾ ਸਰਕਾਰੀ ਕੰਮ ਕਾਜ ਅਤੇ ਵਿਦਿਆ ਦੇ ਖੇਤਰ ਵਿਚ ਪ੍ਰਯੋਗ ਹੋ ਰਿਹਾ ਹੁੰਦਾ ਹੈ, ਕਿਸੇ ਦੂਸਰੀ ਭਾਸ਼ਾ ਦੇ ਟਾਕਰੇ ਤੇ ਜਿਸ ਨੂੰ ਇਹ ਸਥਾਨ ਪ੍ਰਾਪਤ ਨਹੀਂ ਹੋਇਆ ਹੁੰਦਾ, ਵਿਕਸਤ ਮੰਨੀ ਜਾਂਦੀ ਹੈ। ਹਰ ਉਸ ਭਾਸ਼ਾ ਨੂੰ ਜਿਸ ਨੂੰ ਇਕ ਲੰਮੇ ਤੋਂ ਰਾਜ ਭਾਸ਼ਾ ਹੋਣ ਅਤੇ ਸਿੱਖਿਆ ਦੇ ਖੇਤਰ ਵਿਚ ਮਾਧਿਅਮ ਵਜੋਂ ਵਰਤੇ ਜਾਣ ਦਾ ਅਵਸਰ ਪ੍ਰਾਪਤ ਹੋ ਚੁੱਕਾ ਹੈ, ਉਨਤ ਭਾਸ਼ਾਵਾਂ ਦੀ ਕਤਾਰ ਵਿਚ ਜਾ ਖੜੀ ਹੁੰਦੀ ਹੈ। ਅਜਿਹੀ ਭਾਸ਼ਾ ਨਾਲ ਸਬੰਧਤ ਹਰ ਭਾਂਤ ਦੀ ਸਮੱਗਰੀ ਬੁਲਾਰਿਆਂ ਨੂੰ ਲੋੜ ਅਨੁਸਾਰ ਪ੍ਰਾਪਤ ਹੁੰਦੀ ਹੈ। ਪਰ ਕਿਸੇ ਵੀ ਅਜਿਹੀ ਹੋਰ ਭਾਸ਼ਾ ਦੀਆਂ ਲੋੜਾਂ, ਜਿਸ ਨੂੰ ਰਾਜ-ਭਾਸ਼ਾ ਦਾ ਦਰਜਾ ਵੀ ਅਤੇ ਸਿੱਖਿਆ ਦੇ ਖੇਤਰ ਵਿਚ ਮਾਧਿਅਮ ਵਜੋਂ ਵਰਤੇ ਜਾਣ ਦਾ ਅਵਸਰ ਵੀ ਨਵਾਂ-ਨਵਾਂ ਪ੍ਰਾਪਤ ਹੋਇਆ ਹੋਵੇ, ਜਿਵੇਂ ਕਿ ਪੰਜਾਬੀ ਨੂੰ ਹੋਇਆ ਹੈ, ਬਹੁਤ ਜ਼ਿਆਦਾ ਹੁੰਦੀਆਂ ਹਨ। ਅਜਿਹੀ ਭਾਸ਼ਾ ਦੀਆਂ ਇਹ ਲੋੜਾਂ ਹਵਾਲਾ ਕੇਸ਼, ਤਕਨੀਕੀ ਸ਼ਬਦਾਵਲੀ, ਸਰਬੰਗੀ ਵਿਆਕਰਨ ਰਚ ਕੇ ਸਧਾਰਨ ਸ਼ਬਦਾਂ ਨੂੰ ਵਿਸ਼ੇਸ਼ ਅਰਥ ਪ੍ਰਦਾਨ ਕਰਕੇ ਅਤੇ ਲੋੜ ਅਨੁਸਾਰ ਦੂਜੀਆਂ ਭਾਸ਼ਾਵਾਂ ਵਿਚੋਂ ਬੁਨਿਆਦੀ ਪੁਸਤਕਾਂ ਦਾ ਅਨੁਵਾਦ ਕਰਕੇ ਪੂਰੀਆਂ ਕਰੀਆਂ ਜਾਂਦੀਆਂ ਹਨ।

SubQuestion No : 120

Q.120 ਕਿਸੇ ਭਾਸ਼ਾ ਦੀ ਕੀ ਸਮਰੱਥਾ ਹੁੰਦੀ ਹੈ?

- Ans
- ☒ 1. ਉਪਰੋਕਤ ਵਿਚੋਂ ਕੋਈ ਨਹੀਂ
  - ☒ 2. ਕਿਸੇ ਕਿਸੇ ਦੀ ਸਮਝ ਵਿਚ ਆਉਂਦੀ ਹੈ
  - ☒ 3. ਕਿਸੇ ਹੋਰ ਭਾਸ਼ਾ ਦੀ ਮੁਹਤਾਜੀ ਨਹੀਂ ਹੁੰਦੀ
  - ☒ 4. ਕੋਈ ਕੋਈ ਪੜ੍ਹ ਸਕਦਾ ਹੈ

Question ID : 63068047593

Status : Answered

Chosen Option : 1



Q.121 Match the following mobile phone brands with their origin country.

I	Nokia	1	United States of America
II	Samsung	2	Finland
III	Apple	3	South Korea

- Ans
- ☐ 1. I-1, II-3, III-2
  - ☐ 2. I-3, II-2, III-1
  - ☐ 3. I-1, II-2, III-3
  - ☒ 4. I-2, II-3, III-1

Question ID : 63068047391  
Status : Answered  
Chosen Option : 2

Q.122 In MS Word 2019, which shortcut key is used to close the document?

- Ans
- ☐ 1. Ctrl + C
  - ☒ 2. Ctrl + W
  - ☐ 3. Alt + C
  - ☐ 4. Alt + W

Question ID : 63068047217  
Status : Answered  
Chosen Option : 2

Q.123 Which of the following pair is correct regarding printer?

- I. DOTMATRIX – Impact printer  
II. INKJET – Non-impact printer

- Ans
- ☐ 1. Neither I nor II
  - ☐ 2. Only II
  - ☒ 3. Both I and II
  - ☐ 4. Only I

Question ID : 63068047176  
Status : Answered  
Chosen Option : 3

Q.124 Search engines use algorithms for ranking Google uses an algorithm called \_\_\_\_\_.

- Ans
- ☒ 1. Page Rank
  - ☐ 2. Data Rank
  - ☐ 3. File Rank
  - ☐ 4. Address Rank

Question ID : 63068047342  
Status : Answered  
Chosen Option : 1

Q.125 Which output is permanent in nature?

- Ans ☒ 1. Hardcopy output  
☐ 2. Audio output  
☐ 3. Soft-copy output  
☐ 4. Output shown on screen

Question ID : 63068047166  
Status : Answered  
Chosen Option : 1

Q.126 In MS Word 2019, from which tab can the user access the ruler?

- Ans ☐ 1. Review  
☐ 2. Layout  
☐ 3. Design  
☒ 4. View

Question ID : 63068047199  
Status : Answered  
Chosen Option : 2

Q.127 Consider the following directory entry as shown in figure.

File Name	Type and size	Location info	Protection info	Open count	Lock	Flags	Misc info

Which flag field indicates that a file is directory?

- Ans ☐ 1. F  
☐ 2. 0  
☒ 3. D  
☐ 4. 1

Question ID : 63068047280  
Status : Answered  
Chosen Option : 2

Q.128 Which of the following is a/are feature/s of Web 2.0 applications?

- I. Modularity  
II. User Centric Services

- Ans ☐ 1. Only I  
☒ 2. Both I and II  
☐ 3. Neither I nor II  
☐ 4. Only II

Question ID : 63068047304  
Status : Answered  
Chosen Option : 2



Q.129 Which of the following is the idea for optimising your website for search engines?

I. Identify the keywords that your prospects use to find your products or services.

II. Make sure that the source code of all webpages has an appropriate title, description, keyword meta – tags.

Ans ☒ 1. Both I and II

☐ 2. Only II

☐ 3. Neither I nor II

☐ 4. Only I

Question ID : 63068047360

Status : Answered

Chosen Option : 1

Q.130 MS-DOS stands for \_\_\_\_\_.

Ans ☒ 1. Microsoft Disk Operating System

☐ 2. Microsoft Dual Operating System

☐ 3. Microsoft Distributed Operating System

☐ 4. Microsoft Data Operating System

Question ID : 63068045641

Status : Answered

Chosen Option : 3

Q.131 Which of the following is a data processing unit?

Ans ☐ 1. Hard disk

☒ 2. ALU

☐ 3. RAM

☐ 4. Floppy

Question ID : 63068047651

Status : Answered

Chosen Option : 3

Q.132 In MS Word 2019, which shortcut key is used to change case of selected text?

Ans ☐ 1. Shift + F5

☐ 2. Shift + F6

☒ 3. Shift + F3

☐ 4. Shift + F2

Question ID : 63068047215

Status : Answered

Chosen Option : 2

Q.133 In VPN security, what is the full form of VPN?

Ans ☒ 1. Virtual Private Network

☐ 2. Visual Public Network

☐ 3. Virtual Public Network

☐ 4. Visual Private Network

Question ID : 63068047386

Status : Answered

Chosen Option : 1

Q.134 Data coded in the form of small lines is known as \_\_\_\_\_.

Ans ☐ 1. Character code

☐ 2. Gray code

☒ 3. Bar code

☐ 4. Line code

Question ID : 63068047147

Status : Answered

Chosen Option : 3

Q.135 In 'https://www.abc.com/sharing/pqrlo/U14.pdf', what does 'www.abc.com' stand for?

Ans ☒ 1. Domain name

☐ 2. Directing

☐ 3. File name

☐ 4. Protocol

Question ID : 63068047300

Status : Answered

Chosen Option : 1

Q.136 Which of the following is a/are advantage/s of social media and networking?

I. All the information required is one click away.

II. Provides employment opportunities through social media.

Ans ☐ 1. Neither I nor II

☒ 2. Both I and II

☐ 3. Only II

☐ 4. Only I

Question ID : 63068047348

Status : Answered

Chosen Option : 3

Q.137 Batch operating system started with which generations of computer?

- Ans
- ☒ 1. First
  - ☒ 2. Fourth
  - ☒ 3. Fifth
  - ☒ 4. Second

Question ID : 63068047127  
Status : Answered  
Chosen Option : 4

Q.138 In a search engine, total received records against a query are known as \_\_\_\_\_.

- Ans
- ☒ 1. relevance
  - ☒ 2. Index
  - ☒ 3. Precision
  - ☒ 4. Recall

Question ID : 63068047310  
Status : Answered  
Chosen Option : 1

Q.139 The built-in ability of the CPU executes a set of machine instructions, called its \_\_\_\_\_.

- Ans
- ☒ 1. Code set
  - ☒ 2. Instruction set
  - ☒ 3. Operation set
  - ☒ 4. Machine set

Question ID : 63068045392  
Status : Answered  
Chosen Option : 4

Q.140 An \_\_\_\_\_ is an electromechanical device that accepts data from outside world and convert it into computer understandable form.

- Ans
- ☒ 1. output device
  - ☒ 2. auxiliary device
  - ☒ 3. graphic device
  - ☒ 4. input device

Question ID : 63068047156  
Status : Answered  
Chosen Option : 4

Q.141 Find and select icon is found in which tab of MS Excel 2019?

- Ans
- ☒ 1. Insert
  - ☒ 2. Data
  - ☒ 3. Home
  - ☒ 4. Review

Question ID : 63068047232  
Status : Answered  
Chosen Option : 4

Q.142 In MS Word 2019, symbols can be accessed from which tab?

- Ans
- ☒ 1. Home
  - ☒ 2. Insert
  - ☒ 3. References
  - ☒ 4. Layout

Question ID : 63068047205  
Status : Answered  
Chosen Option : 2

Q.143 A disk address comprise of \_\_\_\_.

- I. sector number
- II. track number
- III. segment number
- IV. surface number

- Ans
- ☒ 1. Only I
  - ☒ 2. Only III
  - ☒ 3. I, II and IV
  - ☒ 4. II, III and IV

Question ID : 63068047193  
Status : Answered  
Chosen Option : 2

Q.144 Which of the following pair/s is/are NOT correct?

- I. Fifth generation computer – ICS with VLSI technology
- II. Fourth generation computer – ICS with ULSI technology
- III. Second generation computer – Transistors

- Ans
- ☒ 1. II and III
  - ☒ 2. I and II
  - ☒ 3. I, II and III
  - ☒ 4. Only III

Question ID : 63068047139  
Status : Answered  
Chosen Option : 2

Q.145 \_\_\_\_\_ operating system is the most popular UNIX variant and is a free software.

- Ans
- ☐ 1. Mac
  - ☐ 2. Symbian
  - ☐ 3. Android
  - ☒ 4. LINUX

Question ID : 63068045666  
Status : Answered  
Chosen Option : 3

Q.146 Which of the following is a/are important domain of traditional social networking?

- I. Multiculturalism
- II. Youth associations

- Ans
- ☒ 1. Both I and II
  - ☐ 2. Only I
  - ☐ 3. Neither I nor II
  - ☐ 4. Only II

Question ID : 63068047343  
Status : Answered  
Chosen Option : 1

Q.147 Which of the following is a/are social networking service/s?

- I. Triller
- II. Valence

- Ans
- ☐ 1. Neither I nor II
  - ☐ 2. Only I
  - ☐ 3. Only II
  - ☒ 4. Both I and II

Question ID : 63068047345  
Status : Answered  
Chosen Option : 1

Q.148 In MS Excel 2019, which shortcut key is used to add a new sheet?

- Ans
- ☐ 1. Ctrl + F10
  - ☐ 2. Ctrl + F11
  - ☒ 3. Shift + F11
  - ☐ 4. Shift + F10

Question ID : 63068047233  
Status : Answered  
Chosen Option : 1

Q.149 The increasing penetration of the internet and mobile devices has conveniently spread the mantra of '\_\_\_\_\_' which has turned up as the success key for driving the future of OTT services in India.

- I. anything
- II. anytime
- III. Anywhere

Ans ☒ 1. I, II and III

☒ 2. I and III

☒ 3. I and II

☒ 4. II and III

Question ID : 63068047412

Status : Answered

Chosen Option : 1

Q.150 Which of the following is/are the general step(s) for physical phone security?

- I. Make regular backups
- II. Change the default lock of the basic phone

Ans ☒ 1. Only II

☒ 2. Both I and II

☒ 3. Only I

☒ 4. Neither I nor II

Question ID : 63068047376

Status : Answered

Chosen Option : 3

