



Teachingninja.in



Latest Govt Job updates



Private Job updates



Free Mock tests available

Visit - teachingninja.in



**Punjab
Police Intelligence
Assistant**

**Previous Year Paper
7 Sept 2021 Shift 2**





PUNJAB POLICE

Police to its last particle is duty

Exam Name	INTELLIGENCE ASSISTANT IN INTELLIGENCE CADRE OF PUNJAB POLICE AND CONSTABLE IN INVESTIGATION CADRE OF PUNJAB POLICE (PBI)- 2021
Registration Number	
Application No	
Roll No	
Name of Candidate	
Exam Date	07/09/2021
Shift	2:00 PM - 5:00 PM
Subject	Intelligence Assistant In Intelligence Cadre And Constable In Investigation Cadre

Section : Intelligence Assistant In Intelligence Cadre And Constable In Investigation Cadre

Q.1 Which one of the following is a modern example of ICT (Information Communication Technology)?

- Ans
- ☒ 1. Print media
 - ☒ 2. Radio
 - ☒ 3. Television
 - ☒ 4. Call Centre

Question ID : 63068046567

Status : Answered

Chosen Option : 3

Q.2 How many districts are there in Punjab as of June 2021?

- ns
- ☒ 1. 16
 - ☒ 2. 20
 - ☒ 3. 23
 - ☒ 4. 27

Question ID : 63068046766

Status : nswered

Chosen Option :

Q.3 The _____ of a State appoints the judges of Subordinate Courts in consultation with the Chief Justice of the High Court of the Concerned State.

- Ans ☒ 1. Governor
☒ 2. Home Minister
☒ 3. President
☒ 4. Prime Minister

Question ID : 63068046811
Status : Answered
Chosen Option : 1

Q.4 What is the name of the new scheme proposed in the budget, which is to be implemented by the Aviation Ministry for transporting agricultural products?

- Ans ☒ 1. Bhumi Putra Udan Scheme
☒ 2. Annadata Udan Scheme
☒ 3. Krishi Udan Scheme
☒ 4. Krishak Udan Scheme

Question ID : 63068039059
Status : Answered
Chosen Option : 4

Q.5 A biological model which is expected to perform or behave in a predictable manner within a defined environment is known as ____.

- Ans ☒ 1. Terra -forming
☒ 2. Hydroponics
☒ 3. Ideotype
☒ 4. Response curve

Question ID : 63068046599
Status : Answered
Chosen Option : 3

Q.6 The Sports Authority of India has approved the national coaching camp for which of the following sports in October 2020?

- I. Table tennis
II. Hockey
III. Golf

- Ans ☒ 1. Only I
☒ 2. Only III
☒ 3. II and III
☒ 4. I and II

Question ID : 63068046484
Status : Answered
Chosen Option : 4

Q.7 How much cash incentive is given to pregnant women and lactating mothers by Pradhan Mantri Matru Vandana Yojana?

- Ans ☒ 1. Rs 5000
☒ 2. Rs 1000
☒ 3. Rs 2000
☒ 4. Rs 10000

Question ID : 63068046747
Status : Answered
Chosen Option : 1

Q.8 Which among the following traditional musical instruments is not used in traditional music of Punjab?

- Ans
- ☒ 1. Dhadd
 - ☒ 2. Harp
 - ☒ 3. Tumbi
 - ☒ 4. Algoze

Question ID : 63068046727
Status : Answered
Chosen Option : 2

Q.9 The _____ acts as a link between the Gram Panchayat and the District Administration

- Ans
- ☒ 1. Village Panchayat
 - ☒ 2. Block Level Panchayat
 - ☒ 3. Pradesh Committee
 - ☒ 4. Panchayat Samiti

Question ID : 63068046108
Status : Answered
Chosen Option : 4

Q.10 Cristiano Ronaldo became the first person to reach 250 Million followers on Instagram in January 2021. He is associated with which sport?

- Ans
- ☒ 1. Tennis
 - ☒ 2. Basketball
 - ☒ 3. Hockey
 - ☒ 4. Football

Question ID : 63068046558
Status : Answered
Chosen Option : 4

Q.11 Under which Article of the Indian Constitution can the Governor of a State resume a bill for the consideration of the President?

- Ans
- ☒ 1. Article 200
 - ☒ 2. Article 288A
 - ☒ 3. Article 263
 - ☒ 4. Article 224A

Question ID : 63068046803
Status : Answered
Chosen Option : 1

Q.12 Marieke Lucas Rijneveld won the International Booker Prize 2020 for which of the following novels?

- Ans
- ☒ 1. The Discomfort of Evening
 - ☒ 2. Flights
 - ☒ 3. Homeland Elegies
 - ☒ 4. Celestial Bodies

Question ID : 63068046556
Status : Answered
Chosen Option : 4

Q.13 The jurisdiction of Lakshadweep comes under which High Court?

- Ans
- ☒ 1. Andhra Pradesh High court
 - ☒ 2. Kerala High court
 - ☒ 3. Tamil Nadu High court
 - ☒ 4. Karnataka High court

Question ID : 63068044142
Status : Answered
Chosen Option : 2

Q.14 Annually, every Zila Parishad shall fix _____ of the total expenditure on its establishment.

- Ans
- ☒ 1. 1/5
 - ☒ 2. 1/6
 - ☒ 3. 1/3
 - ☒ 4. 1/4

Question ID : 63068046841
Status : Answered
Chosen Option : 4

Q.15 Which of the following states is the highest tax paying state of India?

- Ans
- ☒ 1. Delhi
 - ☒ 2. Gujarat
 - ☒ 3. Tamil Nadu
 - ☒ 4. Maharashtra

Question ID : 63068020577
Status : Answered
Chosen Option : 2

Q.16 Who won the JCB Prize for Literature 2020?

- Ans
- ☒ 1. Javed Akhtar
 - ☒ 2. Radhey Shyam Barley
 - ☒ 3. Subbu Arumugam
 - ☒ 4. S. Hareesh

Question ID : 63068046456
Status : Answered
Chosen Option : 2

Q.17 Who passed the famous Pakistan Resolution at Lahore?

- Ans
- ☒ 1. Indian National Congress
 - ☒ 2. Akali Dal
 - ☒ 3. Ghadar Party
 - ☒ 4. All-India Muslim League

Question ID : 63068046676
Status : Answered
Chosen Option : 1

Q.18 The idea of the creation of Zonal Councils was suggested by the Prime Minister of India, Pandit Jawahar Lal Nehru, in _____.

- Ans
- ☒ 1. 1966
 - ☒ 2. 1950
 - ☒ 3. 1956
 - ☒ 4. 1977

Question ID : 63068046801
Status : Answered
Chosen Option : 3

Q.19 Which of the following is a Punjabi fast which is observed by mothers for their sons' well being?

- Ans
- ☒ 1. Baisakhi
 - ☒ 2. Bhoogay
 - ☒ 3. Karwa chauth
 - ☒ 4. Jhakrya

Question ID : 63068046712
Status : Answered
Chosen Option : 4

Q.20 The source is converted by _____ into an electrical waveform referred to as the baseband signal or message signal.

- Ans
- ☒ 1. transmitter
 - ☒ 2. input transducer
 - ☒ 3. output transducer
 - ☒ 4. receiver

Question ID : 63068046581
Status : Answered
Chosen Option : 1

Q.21 In January 2021, 'Shramshakti' portal was launched for _____.

- Ans
- ☒ 1. migrant workers
 - ☒ 2. housewives
 - ☒ 3. bureaucrats
 - ☒ 4. Indian teachers

Question ID : 63068046505
Status : Answered
Chosen Option : 4

Q.22 Which of the following Schedules contains the provisions in relation to the allocation of seats for States and Union Territories in the Rajya Sabha?

- Ans
- ☒ 1. 2nd
 - ☒ 2. 3rd
 - ☒ 3. 4th
 - ☒ 4. 1st

Question ID : 63068044100
Status : Answered
Chosen Option : 3

Q.23 A porter lifts a luggage of 40 kg from the ground and puts it on his head 2 m above the ground. Calculate the work done by him on the luggage. take $g=9.8\text{m/s}^2$

Ans ☒ 1. 294 j

☐ 2. 985 J

☐ 3. 745 J

☐ 4. 854 J

Question ID : 63068046631

Status : Answered

Chosen Option : 3

Q.24 Which team has clinched the Vijay Hazare Trophy 2021?

Ans ☐ 1. Jharkhand

☐ 2. Kerala

☒ 3. Mumbai

☐ 4. Tamil Nadu

Question ID : 63068046473

Status : Answered

Chosen Option : 4

Q.25 Which article provides provisions for amending the Constitution?

Ans ☐ 1. Article 362

☐ 2. Article 365

☒ 3. Article 368

☐ 4. Article 340

Question ID : 63068039947

Status : Answered

Chosen Option : 3

Q.26 When was the Cabinet Mission that proposed the formation of an interim government sent to India?

Ans ☒ 1. 1946

☐ 2. 1936

☐ 3. 1945

☐ 4. 1939

Question ID : 63068021170

Status : Answered

Chosen Option : 1

Q.27 Which of the following statements is correct about the 'Kharchi Puja', the festival traditionally celebrated in Tripura?

Ans ☐ 1. It marks the birthday of Lord Chaitanya.

☐ 2. It marks the killing of the demon named 'Mahisha'.

☐ 3. It is celebrated to mark the end of Mahabharata war.

☒ 4. It is observed for cleansing the Earth.

Question ID : 63068039102

Status : Answered

Chosen Option : 1

Q.28 As per the data released in May 2021 on India's FDI inflow, which country has topped the list of Investor countries?

- Ans
- ☐ 1. China
 - ☐ 2. Hong Kong
 - ☐ 3. Mauritius
 - ☒ 4. Singapore

Question ID : 63068046521
Status : Answered
Chosen Option : 4

Q.29 Jehan Daruvala became the first Indian to win a ____.

- Ans
- ☐ 1. Fencing world championship gold medal
 - ☒ 2. Formula 2 race
 - ☐ 3. Tour de France stage
 - ☐ 4. Swimming world championship gold medal

Question ID : 63068046471
Status : Answered
Chosen Option : 2

Q.30 Which of the following statements is correct regarding the 'PM Garib Kalyan Rojgar Abhiyaan'?

- I. This scheme was launched for migrant workers.
II. This scheme will provide livelihood opportunities.

- Ans
- ☐ 1. Only II
 - ☐ 2. Neither I nor II
 - ☐ 3. Only I
 - ☒ 4. Both I and II

Question ID : 63068046513
Status : Answered
Chosen Option : 1

Q.31 White blood cells that produce antibodies and aid in immunological memory are called ____.

- Ans
- ☐ 1. D cells
 - ☐ 2. A cells
 - ☐ 3. T cells
 - ☒ 4. B cells

Question ID : 63068046591
Status : Answered
Chosen Option : 3

Q.32 System boot program is stored in ____.

- Ans
- ☐ 1. RAM
 - ☐ 2. Cache
 - ☐ 3. Floppy disk
 - ☒ 4. ROM

Question ID : 63068046620
Status : Answered
Chosen Option : 4

Q.33 Which Article of Indian Constitution deals with the appointment of ad hoc judges to deal with the unprecedented situation arising from the backlog of cases pending in the High Courts?

- Ans
- ☐ 1. Article 134A
 - ☐ 2. Article 228A
 - ☐ 3. Article 131A
 - ☒ 4. Article 224A

Question ID : 63068046806
Status : Answered
Chosen Option : 4

Q.34 Breeder seed is the progeny of_____.

- Ans
- ☒ 1. Nucleus seed
 - ☐ 2. Neutron
 - ☐ 3. Certified seed
 - ☐ 4. Foundation seed

Question ID : 63068046595
Status : Answered
Chosen Option : 1

Q.35 With which of the following Indian states is Hojagiri folk dance associated?

- Ans
- ☒ 1. Tripura
 - ☐ 2. Sikkim
 - ☐ 3. Lakshadweep
 - ☐ 4. Meghalaya

Question ID : 63068039245
Status : Answered
Chosen Option : 2

Q.36 Which of the following is not a characteristic of a computer?

- Ans
- ☐ 1. Data storage
 - ☐ 2. Accuracy
 - ☒ 3. IQ
 - ☐ 4. Speed

Question ID : 63068046616
Status : Answered
Chosen Option : 3

Q.37 How much work was done if 4 N of force was used to move an object 15 meters?

- Ans
- ☐ 1. 45 J
 - ☐ 2. 100 J
 - ☒ 3. 60 J
 - ☐ 4. 90 J

Question ID : 63068046641
Status : Answered
Chosen Option : 3

Q.38 Who addressed the sixth edition of Indo-Japan SAMVAD Conference from India?

- Ans
- ☐ 1. Nirmala Sitharaman
 - ☐ 2. Piyush Goyal
 - ☐ 3. Amit Shah
 - ☒ 4. Narendra Modi

Question ID : 63068046531
Status : Answered
Chosen Option : 2

Q.39 Which of the following statements is NOT true about the Draft Constitution of India?

- Ans
- ☐ 1. The Articles of the Draft were organised in 18 Parts and 8 Schedules.
 - ☐ 2. It consisted of 315 Articles.
 - ☒ 3. On 5 November 1948, BR Ambedkar, the Chairman of the Drafting Committee, formally introduced the Draft in the assembly.
 - ☐ 4. The Draft was the first blueprint of the Indian Constitution that was publicly available.

Question ID : 63068046786
Status : Answered
Chosen Option : 3

Q.40 How many significant figures does the number 0.00000378 have?

- Ans
- ☐ 1. 9
 - ☐ 2. 10
 - ☐ 3. 4
 - ☒ 4. 3

Question ID : 63068046643
Status : Answered
Chosen Option : 1

Q.41 A and B together can do a piece of work in 22 days. If A alone can do the same work in 30 days, then in how many days can B alone do the same work?

- Ans
- ☒ 1. $165/2$ days
 - ☐ 2. $55/7$ days
 - ☐ 3. $230/3$ days
 - ☐ 4. $433/11$ days

Question ID : 63068046966
Status : Answered
Chosen Option : 1

Q.42 The floor of a building consists of 2000 tiles which are rhombus shaped, and each of its diagonals are 25 cm and 32 cm in length. Find the total cost of polishing the floor, if the cost per square metre is Rs. 5.

- Ans
- ☐ 1. Rs. 450
 - ☐ 2. Rs. 625
 - ☒ 3. Rs. 400
 - ☐ 4. Rs. 410

Question ID : 63068026676
Status : Answered
Chosen Option : 3

Q.43 A right triangle ABC right at B, base BC = 14 cm, and altitude AB = 6 cm, revolves around AB and forms a conical shape. Find the volume of the obtained cone. (Take $\pi = \frac{22}{7}$)

- Ans
- ☒ 1. 1332 cm^3
 - ☒ 2. 1232 cm^3
 - ☒ 3. 1432 cm^3
 - ☒ 4. 1132 cm^3

Question ID : 63068026905

Status : Answered

Chosen Option : 2

Q.44 Maya took a loan of Rs. 2500 with simple interest for as many years as the rate of interest. If she paid Rs. 100 as interest at the end of the loan period, what was the rate of interest?

- Ans
- ☒ 1. 6%
 - ☒ 2. 2%
 - ☒ 3. 4%
 - ☒ 4. 5%

Question ID : 63068042613

Status : Answered

Chosen Option : 2

Q.45 The area of a circular garden is 138600 sq. m. Find the cost of fencing the circular garden @ ₹ 5 per meter. (Use $\pi = 22/7$)

- Ans
- ☒ 1. ₹. 6000
 - ☒ 2. ₹. 6600
 - ☒ 3. ₹. 4000
 - ☒ 4. ₹. 6500

Question ID : 63068041087

Status : Answered

Chosen Option : 2

Q.46 Value of the numerical expression $\frac{0.304 \times 0.002 \times 1.8}{0.0009 \times 0.0038}$ in simplest form will be

- Ans
- ☒ 1. 320
 - ☒ 2. 32
 - ☒ 3. 0.32
 - ☒ 4. 3.2

Question ID : 63068041314

Status : Answered

Chosen Option : 1

Q.47 In 14 years the simple interest on a sum of money becomes $\frac{3}{7}$ of the sum invested. What is the approximate percentage rate of simple interest per annum?

- Ans
- ☒ 1. 1%
 - ☒ 2. 2%
 - ☒ 3. 3%
 - ☒ 4. 9%

Question ID : 63068046935

Status : Answered

Chosen Option : 3

Q.48 If the length of the side of a square is decreased by 15%, then find the percentage decline in the area.

- Ans
- ☒ 1. 33%
 - ☒ 2. 27.75%
 - ☒ 3. 30%
 - ☒ 4. 32%

Question ID : 63068046889
Status : Answered
Chosen Option : 2

Q.49 22977 is divisible by _____.

- Ans
- ☒ 1. 4
 - ☒ 2. 7
 - ☒ 3. 3
 - ☒ 4. 2

Question ID : 63068040394
Status : Answered
Chosen Option : 3

Q.50 What is the value of $10 + (343 \div 0.7)$?

- Ans
- ☒ 1. 59
 - ☒ 2. 490
 - ☒ 3. 590
 - ☒ 4. 500

Question ID : 63068031434
Status : Answered
Chosen Option : 4

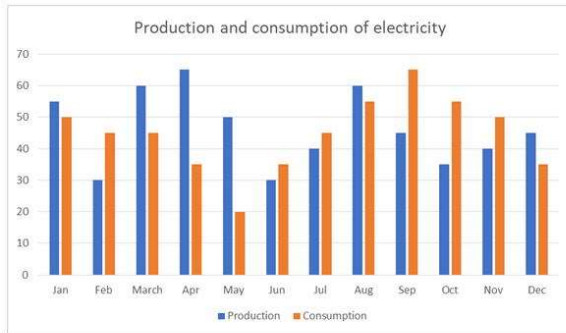
Q.51 If $a - b = 6$ and $a^2 + b^2 = 56$, then find the value of ab .

- Ans
- ☒ 1. 10
 - ☒ 2. 20
 - ☒ 3. 16
 - ☒ 4. 15

Question ID : 63068041117
Status : Answered
Chosen Option : 1

Q.52 Read the chart carefully and answer the questions.

This bar graph shows the production and consumption of electricity by a state in a year. (in thousand Kilo watt)



In which of the following months the consumption of electricity is less than 30 (thousand kilo watt)?

- Ans
- ☒ 1. August
 - ☒ 2. January
 - ☒ 3. May
 - ☒ 4. April

Question ID : 63068041495

Status : Answered

Chosen Option : 3

Q.53 Find the LCM of the following 3 numbers.

15, 18, 30

- Ans
- ☒ 1. 90
 - ☒ 2. 60
 - ☒ 3. 30
 - ☒ 4. 100

Question ID : 63068040741

Status : Answered

Chosen Option : 1

Q.54 A man sells three blazers X, Y, and Z after some discount for ₹2,520 each. He gives huge discount and sells blazer X at 30% loss, blazer Y at 36.36% profit and blazer Z at profit. If there is no profit or loss in the whole transaction, find the cost price of blazer Z, correct to the nearest integer.

- Ans
- ☒ 1. ₹ 2,200
 - ☒ 2. ₹ 1,212
 - ☒ 3. ₹ 2,000
 - ☒ 4. ₹ 2,112

Question ID : 63068040995

Status : Answered

Chosen Option : 4

Q.55 $a = 2.23$, $b = 6.37$, $c = 4.14$ Find $(a)^3 + (-b)^3 + (c)^3$

- Ans
- ☒ 1. 58.8091
 - ☒ 2. -176.4273
 - ☒ 3. 0
 - ☒ 4. -3

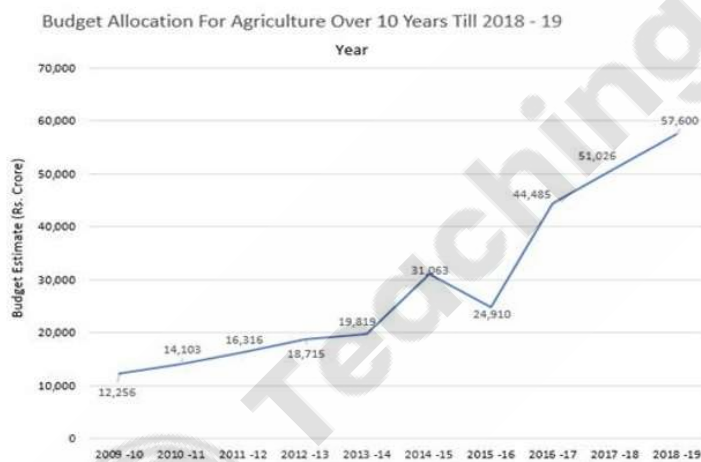
Question ID : 63068040921
Status : Answered
Chosen Option : 2

Q.56 A lent Rs. 6000 for 2 years at 6% simple interest per annum and borrowed Rs. 4000 for 5 years at 5% simple interest per annum. How much was the difference between the interest he paid and the interest he earned?

- Ans
- ☒ 1. Rs. 340
 - ☒ 2. Rs. 280
 - ☒ 3. Rs. 200
 - ☒ 4. Rs. 400

Question ID : 63068046918
Status : Answered
Chosen Option : 2

Q.57 Study the following line graph and answer the questions given.



What is the difference in budget allocation for agriculture among the years 2013-14 and 2009-10? (in Rupees crore)

- Ans
- ☒ 1. 7563
 - ☒ 2. 6753
 - ☒ 3. 4567
 - ☒ 4. 5763

Question ID : 63068040910
Status : Answered
Chosen Option : 1

Q.58 Find the average of 26, 29, 37, 41 and 47.

- Ans
- ☒ 1. 34.5
 - ☒ 2. 45
 - ☒ 3. 40
 - ☒ 4. 36

Question ID : 63068046972

Status : Answered

Chosen Option : 4

Q.59 Rohan, Ram and Rohit start a journey simultaneously from M to N. Rohan reaches N, turns back and meets Ram at a distance of 11km away from N. Ram reached N, turned back, and met Rohit at a distance of 9km away from N. If the ratio of the speeds of Rohan and Rohit is 3:2, then what is the distance between M and N?

- Ans
- ☒ 1. 69 km
 - ☒ 2. 79 km
 - ☒ 3. 89 km
 - ☒ 4. 99 km

Question ID : 63068042639

Status : Answered

Chosen Option : 3

Q.60 Two students appeared at an examination. One of them secured 20 marks more than the other and his marks was 75% of the sum of their marks. The marks obtained by them are _____.

- Ans
- ☒ 1. 13 and 33
 - ☒ 2. 30 and 50
 - ☒ 3. 15 and 35
 - ☒ 4. 10 and 30

Question ID : 63068046897

Status : Answered

Chosen Option : 4

Q.61 Four drummers start drumming together and they drum at intervals of 5, 10, 12 and 20 sec respectively. In 1 hour, how many times do they toll together? (excluding the one at start)

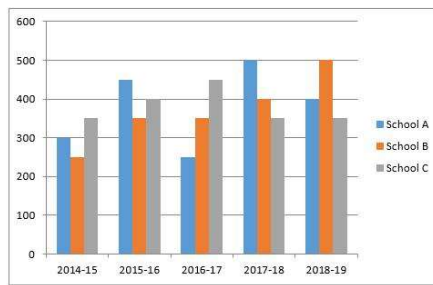
- Ans
- ☒ 1. 20
 - ☒ 2. 60
 - ☒ 3. 120
 - ☒ 4. 1

Question ID : 63068046861

Status : Answered

Chosen Option : 4

Q.62 The bar graph shown here gives the data of number of students passing out from three different schools A, B and C over the different academic years. Study the bar graph and answer the questions.



The average of passed students for five years continuously, was maximum for which of the following schools?

- Ans
- ☒ 1. School A
 - ☒ 2. School A and C both
 - ☒ 3. School C
 - ☒ 4. School B

Question ID : 63068031496

Status : Answered

Chosen Option : 2

Q.63 Find the ratio of the diagonal of a square of side 42 cm, to its side.

- Ans
- ☒ 1. 1 : 3
 - ☒ 2. 3 : 1
 - ☒ 3. $1 : \sqrt{2}$
 - ☒ 4. $\sqrt{2} : 1$

Question ID : 63068041203

Status : Answered

Chosen Option : 4

Q.64 The ratio of the number of boys and girls in a college is 5 : 7 . If the percentage increase in the number of boys and girls be 50% and 40% respectively, what will be the new ratio?

- Ans
- ☒ 1. 65:71
 - ☒ 2. 77:87
 - ☒ 3. 44:57
 - ☒ 4. 75:98

Question ID : 63068046908

Status : Answered

Chosen Option : 4

Q.65 If $p = \{(-3) + (-8) \div (-4) - 2 \times (-2)\}$, then find the value of $p^2 + 2p - 6$.

- Ans
- ☒ 1. 21
 - ☒ 2. 18
 - ☒ 3. 9
 - ☒ 4. 19

Question ID : 63068041134

Status : Answered

Chosen Option : 3

Q.66 Which of the following numbers is not a perfect square?

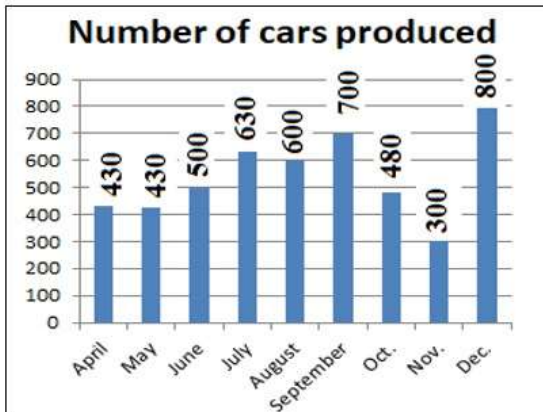
- Ans
- ☐ 1. 576
 - ☒ 2. 1146
 - ☐ 3. 484
 - ☐ 4. 1024

Question ID : 63068042508

Status : Answered

Chosen Option : 2

Q.67



The above Bar Graph is depicting the production of cars by a reputed company. What percent of total production was produced by the company in the month of August?

- Ans
- ☐ 1. 14.37%
 - ☐ 2. 12.93%
 - ☒ 3. 12.32%
 - ☐ 4. 12.11%

Question ID : 63068041103

Status : Answered

Chosen Option : 3

Q.68

What is the value of: $\frac{1\frac{1}{5} - 1\frac{1}{6}}{3\frac{5}{6} - 2\frac{4}{5}}$ of Rs. 155

- Ans
- ☐ 1. Rs. 31
 - ☐ 2. Rs. $\frac{5}{31}$
 - ☒ 3. Rs. 5
 - ☐ 4. Rs. 50

Question ID : 63068041331

Status : Answered

Chosen Option : 3

Q.69 If Roy drinks 800ml of water daily, then how many litres of water will he drink in 3 weeks?

- Ans
- ☒ 1. 16.6L
 - ☒ 2. 16L
 - ☒ 3. 16.8L
 - ☒ 4. 17.2L

Question ID : 63068042476

Status : Answered

Chosen Option : 3

Q.70 If the average marks of three batches of 45, 50 and 40 students are respectively 40, 35 and 60, then the approximate average marks of all the students taken together is _____.

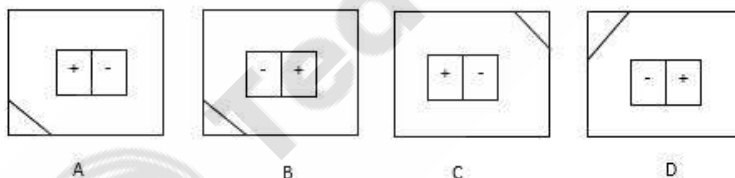
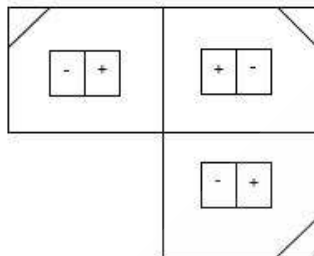
- Ans
- ☒ 1. 54
 - ☒ 2. 40
 - ☒ 3. 34
 - ☒ 4. 44

Question ID : 63068046984

Status : Answered

Chosen Option : 4

Q.71 Select the correct alternative which can complete the figure:



- Ans
- ☒ 1. D
 - ☒ 2. C
 - ☒ 3. A
 - ☒ 4. B

Question ID : 63068038759

Status : Answered

Chosen Option : 3

Q.72 In a row of 25 persons, X was 5th from the right end and Y was at a gap of 9 from X, if H was 3rd to the right of Y, then what will be H's position from the left end of the row?

- Ans
- ☒ 1. 10
 - ☒ 2. 11
 - ☒ 3. 13
 - ☒ 4. 14

Question ID : 63068047109

Status : Answered

Chosen Option : 4

Q.73 Find Number Pair Out of the following options

- Ans
- ☒ 1. 17 - 290
 - ☒ 2. 13 - 170
 - ☒ 3. 21 - 442
 - ☒ 4. 14 - 195

Question ID : 63068038361

Status : Answered

Chosen Option : 4

Q.74 Find the missing letters in the pattern:

_ m n o _ _ o l _ o _ m o l _ n

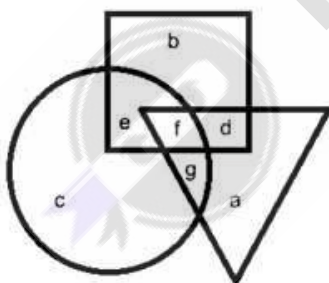
- Ans
- ☒ 1. l m n l m n
 - ☒ 2. l m n n l m
 - ☒ 3. n m l l m n
 - ☒ 4. l m n l m

Question ID : 63068044893

Status : Answered

Chosen Option : 1

Q.75 In the following figure, the circle represents Females, the square represents Students and the triangle represents Athletes.



Which of the following letters in the figures represents Athletes who are neither Students nor Females?

- Ans
- ☒ 1. a
 - ☒ 2. g
 - ☒ 3. d
 - ☒ 4. f

Question ID : 63068044871

Status : Answered

Chosen Option : 1

Q.76 Select the option that is related to the third term on the same basis as the second term is related to the first term.
BP : ES :: NT : ?

Ans ☒ 1. QW

☒ 2. PU

☒ 3. QV

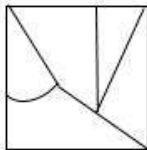
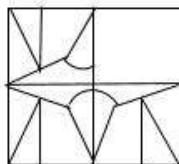
☒ 4. PX

Question ID : 63068047053

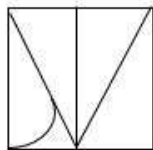
Status : Answered

Chosen Option : 1

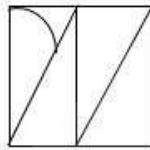
Q.77 Identify the alternative which complete the figure:



A



B



C



D

Ans ☒ 1. B

☒ 2. D

☒ 3. A

☒ 4. C

Question ID : 63068038762

Status : Answered

Chosen Option : 3

Q.78 In the question below two statements are given, followed by two conclusions, I and II. You have to consider the statements to be true even if they seem to be at variance from commonly known facts. You have to decide which of the given conclusions, if any, follows from the given statements.

Statements:

1. Some grey are silk.

2. All pinks are grey.

Conclusions:

I. Some silk are grey.

II. Some grey are pink.

Ans ☒ 1. Only conclusion II follows.

☒ 2. Both conclusion I and II follow.

☒ 3. Only conclusion I follows.

☒ 4. Neither conclusion I nor II follow.

Question ID : 63068047002

Status : Answered

Chosen Option : 2

Q.79 In a row of girls facing North, Reena is 10th to the left of Pallavi, who is 21st from right end. If Malini, who is 17th from the left end, is fourth to the right of Reena, how many girls are there in the row?

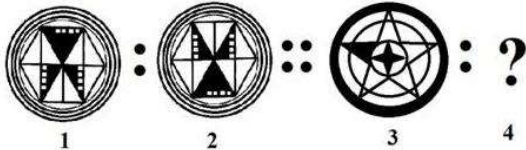
- Ans
- ☒ 1. 44
 - ☒ 2. 37
 - ☒ 3. 43
 - ☒ 4. 46

Question ID : 63068045110

Status : Answered

Chosen Option : 3

Q.80 Select the option that is related to Figure 3 in the same way as Figure 2 is related to Figure 1.



Ans

- ☒ 1.
- ☒ 2.
- ☒ 3.
- ☒ 4.

Question ID : 63068038203

Status : Answered

Chosen Option : 4

Q.81 Select the option that is related to the third number in the same way as the second number is related to the first number and the sixth number is related to the fifth number.

125 : 25 :: 343 : ? :: 729 : 81

Ans ☒ 1. 49

☒ 2. 64

☒ 3. 80

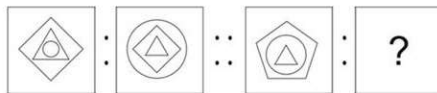
☒ 4. 72

Question ID : 63068021405

Status : Answered

Chosen Option : 1

Q.82 Select the option that is related to the third figure in the same way as the second figure is related to the first figure.



Ans

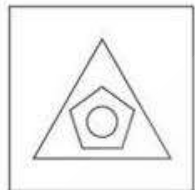
☒ 1.



☒ 2.



☒ 3.



☒ 4.



Question ID : 63068026046

Status : Answered

Chosen Option : 3

Q.83 Select the correct alternative to indicate the arrangement of the following words in a logical and meaningful order.

1. Ankle
2. Foot
3. Knee
4. Thigh

Ans ☒ 1. 3, 1, 4, 2
☒ 2. 2, 1, 4, 3
☒ 3. 2, 1, 3, 4
☒ 4. 1, 2, 3, 4

Question ID : 63068026094
Status : Answered
Chosen Option : 3

Q.84 Select the option that can replace the question mark (?) in the following series.
75, 82, 76, 83, 77, 84, ?

Ans ☒ 1. 67
☒ 2. 72
☒ 3. 78
☒ 4. 75

Question ID : 63068038321
Status : Answered
Chosen Option : 3

Q.85 Mr. Rohtas walks 10 km towards the north and then turns to the left. After walking 6 km he turns to the right and again walks 10 km. What direction is he facing in right now?

Ans ☒ 1. West
☒ 2. East
☒ 3. North
☒ 4. South

Question ID : 63068038981
Status : Answered
Chosen Option : 3

Q.86 Select the option that is related to the third term on the same basis as the second term is related to the first term.
BDF : IJM :: OQS : ?

Ans ☒ 1. VXV
☒ 2. XVZ
☒ 3. VWZ
☒ 4. ZXV

Question ID : 63068047052
Status : Answered
Chosen Option : 3

Q.87 Select the correct option that indicates the arrangement of the following instruments and actions in a logical and meaningful order.

1. Jupiter
2. Earth
3. Sun
4. Neptune
5. Uranus

Ans ☒ 1. 2, 4, 5, 1, 3

☒ 2. 2, 4, 5, 3, 1

☒ 3. 3, 2, 5, 1, 4

☒ 4. 3, 4, 1, 2, 5

Question ID : 63068038668

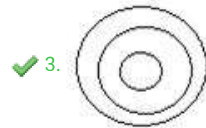
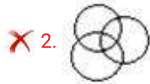
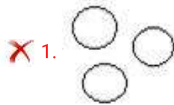
Status : Answered

Chosen Option : 2

Q.88 Select an option that correctly depicts the relationship between the following.

Shark, Animal, Fish

Ans



Question ID : 63068038237

Status : Answered

Chosen Option : 3

Q.89 A person starts running from a point towards south direction for 8 km. After that he turns right and walks for 5 more km. He further walks 3 km in south and from there walk 5 km in North direction and stops. He is in which direction from the starting point.

Ans ☒ 1. North- East

☒ 2. South - West

☒ 3. North-West

☒ 4. South- East

Question ID : 63068038313

Status : Answered

Chosen Option : 1

Q.90 Select the option in which the numbers are related in the same way as are the numbers in the given set.
(16, 81, 256)

- Ans ☒ 1. (64, 27, 8)
☒ 2. (39, 26, 13)
☒ 3. (27, 54, 81)
☒ 4. (49, 121, 64)

Question ID : 63068037809
Status : Answered
Chosen Option : 4

Q.91 In a certain code language, 'GSJRJ' is written as '320' and 'EPVAKD' is written as '354'. How will 'TENT' be written in that code language?

- Ans ☒ 1. 230
☒ 2. 332
☒ 3. 236
☒ 4. 352

Question ID : 63068047076
Status : Answered
Chosen Option : 3

Q.92 If the word 'EXAM' is coded as '524113' in a particular coding language, then how will 'RESULT' be coded using the same language?

- Ans ☒ 1. 18512911202
☒ 2. 92286157
☒ 3. 18519211220
☒ 4. 18519122120

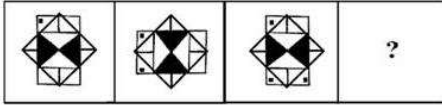
Question ID : 63068038114
Status : Answered
Chosen Option : 3

Q.93 Which one set of letters when sequentially placed in the gaps in the given letter series shall complete it?
c _ o _ c r _ g _ r _ g

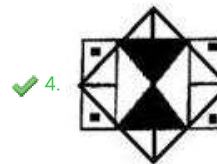
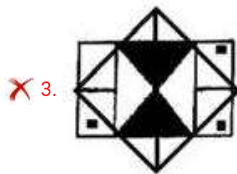
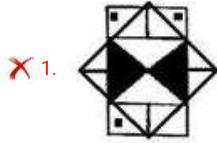
- Ans ☒ 1. regog
☒ 2. crgoc
☒ 3. grcor
☒ 4. rgoco

Question ID : 63068047022
Status : Answered
Chosen Option : 4

Q.94 Select the option figure that will replace the question mark (?) in the following figure series.



Ans

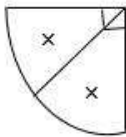
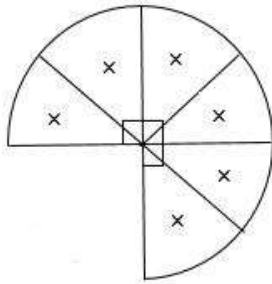


Question ID : 63068038195

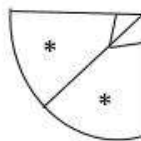
Status : Answered

Chosen Option : 4

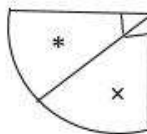
Q.95 Select the correct alternative to complete the figure:



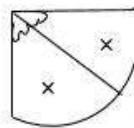
A



B



C



D

- Ans
- ☒ 1. B
 - ☒ 2. A
 - ☒ 3. D
 - ☒ 4. C

Question ID : 63068038795

Status : Answered

Chosen Option : 2

Q.96 Three of the following letter clusters are alike in a certain way and one is different. Pick the odd one.

- Ans
- ☒ 1. GHIJ
 - ☒ 2. PQRS
 - ☒ 3. VWXYZ
 - ☒ 4. CDEF

Question ID : 63068026099

Status : Answered

Chosen Option : 3

Q.97 Study the following arrangement carefully and answer the question given below:

'P % Q' means 'P is wife of Q'

'P \$ Q' means 'P is daughter of Q'

'P & Q' means 'P is father of Q'

As per the above information, what does A \$ B % C & D mean if C has only one daughter?

- Ans
- ☒ 1. D is sister of A.
 - ☒ 2. D is mother of A.
 - ☒ 3. A is sister of D.
 - ☒ 4. A is son of D.

Question ID : 63068047073

Status : Answered

Chosen Option : 3

Q.98 Select the number that can replace the question mark (?) in the following series.
121, 144, 169, 196, ?

- Ans
- ☒ 1. 525
 - ☒ 2. 220
 - ☒ 3. 256
 - ☒ 4. 225

Question ID : 63068038897
Status : Answered
Chosen Option : 4

Q.99 In a class, seven students are given different ranks such that the one who got highest marks was ranked highest i.e. rank 1 and the one who got lowest was ranked lowest. Number of students ranked higher than Q is same as that ranked lower than S. K's marks are less than J's. S is ranked just higher than J. D's marks are lower than T but more than Q, who is ranked higher than S. N's marks are more than J. What is N's rank?

- Ans
- ☒ 1. 2nd
 - ☒ 2. 4th
 - ☒ 3. 5th
 - ☒ 4. 3rd

Question ID : 63068045126
Status : Answered
Chosen Option : 2

Q.100 Complete the equation:
7 : 336 :: 9 : ?

- Ans
- ☒ 1. 43
 - ☒ 2. 710
 - ☒ 3. 720
 - ☒ 4. 612

Question ID : 63068038721
Status : Answered
Chosen Option : 3

Q.101 Rearrange the parts to form a meaningful sentence :

P. in Capricorn, blending the effects of
Q. the airy and social Libran moon
R. both of these two squares
S. forms a square aspect with both Pluto and Jupiter

- Ans
- ☒ 1. QSPR
 - ☒ 2. PSRQ
 - ☒ 3. RSQP
 - ☒ 4. SPQR

Question ID : 63068035596
Status : Answered
Chosen Option : 1

Q.102 Choose the option with the correct spelling.

- Ans
- ☒ 1. Missioneary
 - ☒ 2. Missionary
 - ☒ 3. Misionary
 - ☒ 4. Missionery

Question ID : 63068035250
Status : Answered
Chosen Option : 2

Q.103 In the given sentence, identify the segment which contains grammatical error.

Our criticism/ is best/ than our/ silent admiration.

- Ans
- ☒ 1. silent admiration
 - ☒ 2. Our criticism
 - ☒ 3. is best
 - ☒ 4. than our

Question ID : 63068035738
Status : Answered
Chosen Option : 3

Q.104 Select the option that can best substitute the following set of words.

The study of the origin of words and the way in which their meanings have changed throughout history

- Ans
- ☒ 1. Hagiography
 - ☒ 2. Calligraphy
 - ☒ 3. Etymology
 - ☒ 4. Philology

Question ID : 63068035483
Status : Answered
Chosen Option : 3

Q.105 'ਕੀ ਤੁਹਾਨੂੰ ਮੇਰੇ ਨਾਲ ਕੋਈ ਕੰਮ ਹੈ?' ਵਾਕ ਦਾ ਸਹੀ ਅੰਗਰੇਜ਼ੀ ਅਨੁਵਾਦ ਹੈ:-

- Ans
- ☒ 1. Do you have any job with me?
 - ☒ 2. Do you have any business upto me?
 - ☒ 3. Do you have some business with me?
 - ☒ 4. Do you have any business in me?

Question ID : 63068045556
Status : Answered
Chosen Option : 3

Comprehension:

With the invention of the telegraph, radio and television, print newspapers have faced challenges over the decades, yet publishers have always adapted and persevered. However, the Internet is proving to be a far more dangerous foe to the traditional newspaper model. Faced with such an adversary, small and large newspapers alike may have no choice but to abandon their traditional methods for a more innovative approach.

Newspapers face unrelenting competition from other consumer information sources. Cable television provides 24-hour-a-day news along with in-depth coverage of major events and news stories. Broadcast and cable channel internet sites often cover additional story angles and frequently update content in close to real time.

In contrast, a newspaper operates on non-negotiable production deadlines that limit the freshness of its content. This reduced ability to provide current news, plus readers' tendency to view only certain newspaper sections has helped drive a decline in overall newspaper circulation. From a distance, newspaper circulation looks impressive: 31 million on weekdays and 24 million on Sundays in 2017. But these numbers were down double digits from the year before as newspapers continued to compete with myriad online mediums.

Newspaper ads have never been cheap. The internet has proven to be an effective lure in this domain, too. Typically newspaper ads are priced by four factors: the paper's circulation; the size of the ad; the number of times the ad runs; and when and in what section the ad appears. But no matter what a paper's circulation, it's nearly impossible to tell exactly who actually sees much less reads, a newspaper ad. People have always read newspapers in very different ways, with some focussing on news content while others scan only for bargains found in ads. By contrast, a form of internet advertising called pay-per-click allows a business owner to pay a fee each time his ad is clicked. He may pay \$2 for a single click, but if it generates a \$200 sale, it's money well spent. Moreover, PPC advertising allows an advertiser to see how many people viewed an ad, how many clicked on it and how many responded – valuable information that a Newspaper cannot provide.

SubQuestion No : 106

Q.106 Which of the following statements about newspapers is FALSE?

- Ans
- ☒ 1. Newspapers face a tough competition from their adversaries such as cable TV, internet and other media.
 - ☒ 2. Newspapers cannot keep updating news like most social media or news channels on radio or TV do.
 - ☒ 3. Newspaper and other print media are not worried about losing out on businesses.
 - ☒ 4. Newspaper cannot record information about the number of viewers who have seen a particular ad.

Question ID : 63068035719

Status : Answered

Chosen Option : 3



Comprehension:

With the invention of the telegraph, radio and television, print newspapers have faced challenges over the decades, yet publishers have always adapted and persevered. However, the Internet is proving to be a far more dangerous foe to the traditional newspaper model. Faced with such an adversary, small and large newspapers alike may have no choice but to abandon their traditional methods for a more innovative approach.

Newspapers face unrelenting competition from other consumer information sources. Cable television provides 24-hour-a-day news along with in-depth coverage of major events and news stories. Broadcast and cable channel internet sites often cover additional story angles and frequently update content in close to real time.

In contrast, a newspaper operates on non-negotiable production deadlines that limit the freshness of its content. This reduced ability to provide current news, plus readers' tendency to view only certain newspaper sections has helped drive a decline in overall newspaper circulation. From a distance, newspaper circulation looks impressive: 31 million on weekdays and 24 million on Sundays in 2017. But these numbers were down double digits from the year before as newspapers continued to compete with myriad online mediums.

Newspaper ads have never been cheap. The internet has proven to be an effective lure in this domain, too. Typically newspaper ads are priced by four factors: the paper's circulation; the size of the ad; the number of times the ad runs; and when and in what section the ad appears. But no matter what a paper's circulation, it's nearly impossible to tell exactly who actually sees much less reads, a newspaper ad. People have always read newspapers in very different ways, with some focussing on news content while others scan only for bargains found in ads. By contrast, a form of internet advertising called pay-per-click allows a business owner to pay a fee each time his ad is clicked. He may pay \$2 for a single click, but if it generates a \$200 sale, it's money well spent. Moreover, PPC advertising allows an advertiser to see how many people viewed an ad, how many clicked on it and how many responded – valuable information that a Newspaper cannot provide.

SubQuestion No : 107

Q.107 Which word used in the passage means: an opponent or a challenger?

- Ans
- ☐ 1. people
 - ☐ 2. consumer
 - ☒ 3. adversary
 - ☐ 4. advertiser

Question ID : 63068035720

Status : Answered

Chosen Option : 3



Comprehension:

With the invention of the telegraph, radio and television, print newspapers have faced challenges over the decades, yet publishers have always adapted and persevered. However, the Internet is proving to be a far more dangerous foe to the traditional newspaper model. Faced with such an adversary, small and large newspapers alike may have no choice but to abandon their traditional methods for a more innovative approach.

Newspapers face unrelenting competition from other consumer information sources. Cable television provides 24-hour-a-day news along with in-depth coverage of major events and news stories. Broadcast and cable channel internet sites often cover additional story angles and frequently update content in close to real time.

In contrast, a newspaper operates on non-negotiable production deadlines that limit the freshness of its content. This reduced ability to provide current news, plus readers' tendency to view only certain newspaper sections has helped drive a decline in overall newspaper circulation. From a distance, newspaper circulation looks impressive: 31 million on weekdays and 24 million on Sundays in 2017. But these numbers were down double digits from the year before as newspapers continued to compete with myriad online mediums.

Newspaper ads have never been cheap. The internet has proven to be an effective lure in this domain, too. Typically newspaper ads are priced by four factors: the paper's circulation; the size of the ad; the number of times the ad runs; and when and in what section the ad appears. But no matter what a paper's circulation, it's nearly impossible to tell exactly who actually sees much less reads, a newspaper ad. People have always read newspapers in very different ways, with some focussing on news content while others scan only for bargains found in ads. By contrast, a form of internet advertising called pay-per-click allows a business owner to pay a fee each time his ad is clicked. He may pay \$2 for a single click, but if it generates a \$200 sale, it's money well spent. Moreover, PPC advertising allows an advertiser to see how many people viewed an ad, how many clicked on it and how many responded – valuable information that a Newspaper cannot provide.

SubQuestion No : 108

Q.108 On the internet, payment for an ad is done by

- Ans
- ☐ 1. no one
 - ☐ 2. google
 - ☒ 3. the advertiser
 - ☐ 4. the viewer

Question ID : 63068035721

Status : Answered

Chosen Option : 3



Comprehension:

With the invention of the telegraph, radio and television, print newspapers have faced challenges over the decades, yet publishers have always adapted and persevered. However, the Internet is proving to be a far more dangerous foe to the traditional newspaper model. Faced with such an adversary, small and large newspapers alike may have no choice but to abandon their traditional methods for a more innovative approach.

Newspapers face unrelenting competition from other consumer information sources. Cable television provides 24-hour-a-day news along with in-depth coverage of major events and news stories. Broadcast and cable channel internet sites often cover additional story angles and frequently update content in close to real time.

In contrast, a newspaper operates on non-negotiable production deadlines that limit the freshness of its content. This reduced ability to provide current news, plus readers' tendency to view only certain newspaper sections has helped drive a decline in overall newspaper circulation. From a distance, newspaper circulation looks impressive: 31 million on weekdays and 24 million on Sundays in 2017. But these numbers were down double digits from the year before as newspapers continued to compete with myriad online mediums.

Newspaper ads have never been cheap. The internet has proven to be an effective lure in this domain, too. Typically newspaper ads are priced by four factors: the paper's circulation; the size of the ad; the number of times the ad runs; and when and in what section the ad appears. But no matter what a paper's circulation, it's nearly impossible to tell exactly who actually sees much less reads, a newspaper ad. People have always read newspapers in very different ways, with some focussing on news content while others scan only for bargains found in ads. By contrast, a form of internet advertising called pay-per-click allows a business owner to pay a fee each time his ad is clicked. He may pay \$2 for a single click, but if it generates a \$200 sale, it's money well spent. Moreover, PPC advertising allows an advertiser to see how many people viewed an ad, how many clicked on it and how many responded – valuable information that a Newspaper cannot provide.

SubQuestion No : 109

Q.109 Which of the following factors has not been mentioned in the passage for calculating the cost of ad in a print media?

- Ans** ☒ 1. colour or black and white
- ☒ 2. Frequency of appearance of an ad
- ☒ 3. Section in which the ad appears
- ☒ 4. Size of the ad

Question ID : 63068035722

Status : Answered

Chosen Option : 1



Comprehension:

With the invention of the telegraph, radio and television, print newspapers have faced challenges over the decades, yet publishers have always adapted and persevered. However, the Internet is proving to be a far more dangerous foe to the traditional newspaper model. Faced with such an adversary, small and large newspapers alike may have no choice but to abandon their traditional methods for a more innovative approach.

Newspapers face unrelenting competition from other consumer information sources. Cable television provides 24-hour-a-day news along with in-depth coverage of major events and news stories. Broadcast and cable channel internet sites often cover additional story angles and frequently update content in close to real time.

In contrast, a newspaper operates on non-negotiable production deadlines that limit the freshness of its content. This reduced ability to provide current news, plus readers' tendency to view only certain newspaper sections has helped drive a decline in overall newspaper circulation. From a distance, newspaper circulation looks impressive: 31 million on weekdays and 24 million on Sundays in 2017. But these numbers were down double digits from the year before as newspapers continued to compete with myriad online mediums.

Newspaper ads have never been cheap. The internet has proven to be an effective lure in this domain, too. Typically newspaper ads are priced by four factors: the paper's circulation; the size of the ad; the number of times the ad runs; and when and in what section the ad appears. But no matter what a paper's circulation, it's nearly impossible to tell exactly who actually sees much less reads, a newspaper ad. People have always read newspapers in very different ways, with some focussing on news content while others scan only for bargains found in ads. By contrast, a form of internet advertising called pay-per-click allows a business owner to pay a fee each time his ad is clicked. He may pay \$2 for a single click, but if it generates a \$200 sale, it's money well spent. Moreover, PPC advertising allows an advertiser to see how many people viewed an ad, how many clicked on it and how many responded – valuable information that a Newspaper cannot provide.

SubQuestion No : 110

Q.110 Advertisers prefer to promote their products over internet to newspaper because:

- Ans
- ☒ 1. It gives flash news
 - ☒ 2. It has a fixed rate
 - ☒ 3. It is non negotiable
 - ☒ 4. It is cheaper

Question ID : 63068035723

Status : Answered

Chosen Option : 4

Q.111 'Water and coal are main minerals of India' ਵਾਕ ਦਾ ਸਹੀ ਪੰਜਾਬੀ ਅਨੁਵਾਦ ਹੈ:-

- Ans
- ☒ 1. ਪਾਣੀ ਤੇ ਕੋਇਲਾ ਭਾਰਤ ਦਾ ਮੁੱਖ ਖਣਿਜ ਹੈ।
 - ☒ 2. ਭਾਰਤ ਦੇ ਮੁੱਖ ਧਾਤ ਹੈ ਪਾਣੀ ਤੇ ਕੋਇਲਾ।
 - ☒ 3. ਪਾਣੀ ਤੇ ਕੋਇਲਾ ਭਾਰਤ ਦੇ ਮੁੱਖ ਖਣਿਜ ਹਨ।
 - ☒ 4. ਭਾਰਤ ਦੇ ਮੁੱਖ ਧਾਤ ਪਾਣੀ ਤੇ ਕੋਇਲਾ ਹੈ।

Question ID : 63068047558

Status : Answered

Chosen Option : 3

Q.112 'ਗੁਰੂ' ਸ਼ਬਦ ਦਾ ਵਿਰੋਧੀ ਸ਼ਬਦ ਚੁਣੋ।

- Ans
- ☐ 1. ਅਧਿਆਪਕ
 - ☒ 2. ਮੁਰੀਦ
 - ☐ 3. ਮੁਰਸ਼ਦ
 - ☐ 4. ਰੱਬ

Question ID : 63068047523
Status : Answered
Chosen Option : 2

Q.113 'ਜਿਹੜਾ ਮਨੁੱਖ ਕਿਸੇ ਨਾਲ ਵੀ ਪੱਖ-ਪਾਤ ਨਾ ਕਰੇ' ਲਈ ਇਕ ਸ਼ਬਦ ਚੁਣੋ।

- Ans
- ☐ 1. ਪੱਖ-ਪਾਤੀ
 - ☐ 2. ਸਿਆਣਾ
 - ☒ 3. ਨਿਰਪੱਖ
 - ☐ 4. ਸਮਝਦਾਰ

Question ID : 63068047550
Status : Answered
Chosen Option : 3

Q.114 ਹੇਠ ਲਿਖਿਆਂ ਵਿੱਚੋਂ ਸੁੱਧ ਸ਼ਬਦ ਚੁਣੋ।

- Ans
- ☐ 1. ਸਿਹਟ
 - ☐ 2. ਸਿੱਹਤ
 - ☐ 3. ਸੀਹਤ
 - ☒ 4. ਸਿਹਤ

Question ID : 63068047511
Status : Answered
Chosen Option : 4

Q.115 'ਦੁਸਮਣੀ' ਨੂੰ ਬਿਆਨ ਕਰਦਾ ਮੁਹਾਵਰਾ ਚੁਣੋ।

- Ans
- ☐ 1. ਖੂਨ ਚੱਟਣਾ
 - ☒ 2. ਇੱਟ-ਕੁੱਤੇ ਦਾ ਵੈਰ ਹੋਣਾ।
 - ☐ 3. ਲਹੂ ਚਿੱਟਾ ਹੋਣਾ
 - ☐ 4. ਇੱਕ ਦੀਆਂ ਚਾਰ ਸੁਣਾਉਣਾ

Question ID : 63068047533
Status : Answered
Chosen Option : 2

Comprehension:

ਹੇਠ ਲਿਖੇ ਪੈਰੇ ਨੂੰ ਧਿਆਨ ਨਾਲ ਪੜ੍ਹੋ ਤੇ ਹੇਠਾਂ ਦਿੱਤੇ ਪ੍ਰਸ਼ਨਾਂ ਦੇ ਉੱਤਰ ਦਿਉ -

ਸਾਡੀ ਜਮਾਤ ਵਿਚ ਇਕ ਮੁੰਡਾ ਹੁੰਦਾ ਸੀ ਜਿਸ ਨੂੰ ਸਾਰੇ ਛੇੜਦੇ ਹੁੰਦੇ ਸਨ। ਮੈਂ ਉਸ ਉੱਪਰ ਇਕ ਨਜ਼ਮ ਲਿਖੀ। ਉਹ ਮੈਂ ਕਲਾਸ ਵਿਚ ਸੁਣਾਈ ਜਦ ਮੁੰਡਾ ਉੱਥੇ ਨਹੀਂ ਸੀ। ਇਕ ਜਮਾਤੀ ਨੇ ਮੈਥੋਂ ਉਹ ਲੈ ਕੇ ਉਤਾਰਾ ਕਰ ਲਿਆ ਤੇ ਮਗਰੋਂ ਉਸ ਮੁੰਡੇ ਨੂੰ ਜਾ ਦਿੱਤਾ। ਉਸ ਨੇ ਅੱਗੋਂ ਉਹ ਵਰਕਾ ਮਾਸਟਰ ਮੌਲਾ ਬਖ਼ਸ਼ ਹੋਰਾਂ ਨੂੰ ਜਾ ਦਿੱਤਾ। ਉਹ ਮਾਸਟਰ ਜੀ ਅਨੁਸ਼ਾਸਨ ਵਜੋਂ ਸਾਰੇ ਸਕੂਲ ਵਿਚ ਮੰਨੇ ਹੋਏ ਸਨ। ਉਹ ਵਰਕਾ ਪੜ੍ਹਦਿਆਂ ਹੀ ਉਨ੍ਹਾਂ ਮੈਨੂੰ ਸੱਦ ਘੱਲਿਆ। ਮੈਂ ਪਹੁੰਚਿਆ ਤਾਂ ਉਨ੍ਹਾਂ ਦੇ ਹੱਥ ਵਿਚ ਵਰਕਾ ਦੇਖ ਕੇ ਮੇਰੇ ਤਾਂ ਸੋਤਰ ਸੁੱਕ ਗਏ। ਮੈਂ ਨੀਵੀਂ ਪਾਈ ਖਲੋਤਾਂ ਸਾਂ। ਉਨ੍ਹਾਂ ਮੇਰਾ ਮੂੰਹ ਉੱਪਰ ਚੁੱਕਿਆ ਤੇ ਮੈਨੂੰ ਪੁੱਛਿਆ, "ਇਹ ਤੂੰ ਲਿਖਿਆ?" ਮੈਂ ਨੀਵੀਂ ਪਾ ਲਈ ਤੇ ਸਿਰ ਹਿਲਾ ਕੇ "ਹਾਂ" ਵਿਚ ਜਵਾਬ ਦੇ ਦਿੱਤਾ। ਉਨ੍ਹਾਂ ਮੇਰੀ ਪਿੱਠ 'ਤੇ ਹੱਥ ਫੇਰਿਆ ਤੇ ਬੜੇ ਦਰਦ ਭਰੇ ਲਹਿਜ਼ੇ ਨਾਲ ਕਿਹਾ, "ਓਏ ਕਮਬਖ਼ਤਾ! ਅੱਲਾ ਤਾਅਲਾ ਦਾ ਤੇਰੇ 'ਤੇ ਐਡਾ ਕਰਮ ਹੋਇਆ, ਤੈਨੂੰ ਸਾਇਰੀ ਦੀ ਨਿਆਮਤ ਬਖ਼ਸ਼ੀ ਤੇ ਤੂੰ ਕਾਲੇ ਲੇਖ ਲਿਖਣੇ ਸ਼ੁਰੂ ਕਰ ਦਿੱਤੇ। ਤੋਬਾ ਕਰ, ਮੁੜ ਕਦੇ ਕਾਲੇ ਅੱਖਰ ਨਹੀਂ ਲਿਖੇਗਾ।" ਉਦੋਂ ਤੋਬਾ ਦਾ ਮਤਲਬ ਸੱਚ ਮੁੱਚ ਤੋਬਾ ਹੀ ਹੁੰਦਾ ਸੀ। ਉਸ ਦਿਨ ਦੀ ਤੋਬਾ ਅੱਜ ਤੱਕ ਨਹੀਂ ਭੁੱਲੀ। ਅਸਲ ਪਛਤਾਵਾ ਹੀ ਮਨ ਦਾ ਸੰਸ਼ੋਧਨ ਕਰਦਾ ਹੈ।

SubQuestion No : 116

Q.116 ਉਪਰੋਕਤ ਪੈਰੇ ਦਾ ਢੁੱਕਵਾਂ ਸਿਰਲੇਖ ਲਿਖੋ -

- Ans
- ☒ 1. ਕਿਸੇ ਦੀ ਨਿੰਦਾ ਕਰਨਾ
 - ☒ 2. ਮਾਸਟਰ ਦੀ ਸ਼ਾਬਾਸ਼ੀ
 - ☒ 3. ਤੋਬਾ
 - ☒ 4. ਮਾਸਟਰ ਵਲੋਂ ਸਖ਼ਤ ਸਿੱਖਿਆ ਦੇਣਾ

Question ID : 63068047601

Status : Answered

Chosen Option : 4



Comprehension:

ਹੇਠ ਲਿਖੇ ਪੈਰੇ ਨੂੰ ਧਿਆਨ ਨਾਲ ਪੜ੍ਹੋ ਤੇ ਹੇਠਾਂ ਦਿੱਤੇ ਪ੍ਰਸ਼ਨਾਂ ਦੇ ਉੱਤਰ ਦਿਉ -

ਸਾਡੀ ਜਮਾਤ ਵਿਚ ਇਕ ਮੁੰਡਾ ਹੁੰਦਾ ਸੀ ਜਿਸ ਨੂੰ ਸਾਰੇ ਛੇੜਦੇ ਹੁੰਦੇ ਸਨ। ਮੈਂ ਉਸ ਉੱਪਰ ਇਕ ਨਜ਼ਮ ਲਿਖੀ। ਉਹ ਮੈਂ ਕਲਾਸ ਵਿਚ ਸੁਣਾਈ ਜਦ ਮੁੰਡਾ ਉੱਥੇ ਨਹੀਂ ਸੀ। ਇਕ ਜਮਾਤੀ ਨੇ ਮੈਥੋਂ ਉਹ ਲੈ ਕੇ ਉਤਾਰਾ ਕਰ ਲਿਆ ਤੇ ਮਗਰੋਂ ਉਸ ਮੁੰਡੇ ਨੂੰ ਜਾ ਦਿੱਤਾ। ਉਸ ਨੇ ਅੱਗੋਂ ਉਹ ਵਰਕਾ ਮਾਸਟਰ ਮੌਲਾ ਬਖ਼ਸ਼ ਹੋਰਾਂ ਨੂੰ ਜਾ ਦਿੱਤਾ। ਉਹ ਮਾਸਟਰ ਜੀ ਅਨੁਸ਼ਾਸਨ ਵਜੋਂ ਸਾਰੇ ਸਕੂਲ ਵਿਚ ਮੰਨੇ ਹੋਏ ਸਨ। ਉਹ ਵਰਕਾ ਪੜ੍ਹਦਿਆਂ ਹੀ ਉਨ੍ਹਾਂ ਮੈਨੂੰ ਸੱਦ ਘੱਲਿਆ। ਮੈਂ ਪਹੁੰਚਿਆ ਤਾਂ ਉਨ੍ਹਾਂ ਦੇ ਹੱਥ ਵਿਚ ਵਰਕਾ ਦੇਖ ਕੇ ਮੇਰੇ ਤਾਂ ਸੋਤਰ ਸੁੱਕ ਗਏ। ਮੈਂ ਨੀਵੀਂ ਪਾਈ ਖਲੋਤਾਂ ਸਾਂ। ਉਨ੍ਹਾਂ ਮੇਰਾ ਮੂੰਹ ਉੱਪਰ ਚੁੱਕਿਆ ਤੇ ਮੈਨੂੰ ਪੁੱਛਿਆ, "ਇਹ ਤੂੰ ਲਿਖਿਆ?" ਮੈਂ ਨੀਵੀਂ ਪਾ ਲਈ ਤੇ ਸਿਰ ਹਿਲਾ ਕੇ "ਹਾਂ" ਵਿਚ ਜਵਾਬ ਦੇ ਦਿੱਤਾ। ਉਨ੍ਹਾਂ ਮੇਰੀ ਪਿੱਠ 'ਤੇ ਹੱਥ ਫੇਰਿਆ ਤੇ ਬੜੇ ਦਰਦ ਭਰੇ ਲਹਿਜ਼ੇ ਨਾਲ ਕਿਹਾ, "ਓਏ ਕਮਬਖ਼ਤਾ! ਅੱਲਾ ਤਾਅਲਾ ਦਾ ਤੇਰੇ 'ਤੇ ਐਡਾ ਕਰਮ ਹੋਇਆ, ਤੈਨੂੰ ਸਾਇਰੀ ਦੀ ਨਿਆਮਤ ਬਖ਼ਸ਼ੀ ਤੇ ਤੂੰ ਕਾਲੇ ਲੇਖ ਲਿਖਣੇ ਸ਼ੁਰੂ ਕਰ ਦਿੱਤੇ। ਤੋਬਾ ਕਰ, ਮੁੜ ਕਦੇ ਕਾਲੇ ਅੱਖਰ ਨਹੀਂ ਲਿਖੇਗਾ।" ਉਦੋਂ ਤੋਬਾ ਦਾ ਮਤਲਬ ਸੱਚ ਮੁੱਚ ਤੋਬਾ ਹੀ ਹੁੰਦਾ ਸੀ। ਉਸ ਦਿਨ ਦੀ ਤੋਬਾ ਅੱਜ ਤੱਕ ਨਹੀਂ ਭੁੱਲੀ। ਅਸਲ ਪਛਤਾਵਾ ਹੀ ਮਨ ਦਾ ਸੰਸ਼ੋਧਨ ਕਰਦਾ ਹੈ।

SubQuestion No : 117

Q.117 ਇਸ ਪੈਰੇ ਦਾ ਲੇਖਕ ਮੁੰਡਾ ਪੜ੍ਹਾਈ ਤੋਂ ਬਿਨਾਂ ਹੋਰ ਕੀ ਹੁਨਰ ਰੱਖਦਾ ਸੀ?

Ans

- ✓ 1. ਕਵਿਤਾ ਲਿਖਦਾ ਸੀ
- ✗ 2. ਕਾਲੇ ਅੱਖਰ ਲਿਖਦਾ ਸੀ
- ✗ 3. ਗੁੱਲੀ-ਡੰਡਾ ਖੇਡਦਾ ਸੀ
- ✗ 4. ਸ਼ਰਾਰਤੀ ਸੀ

Question ID : 63068047602

Status : Answered

Chosen Option : 1



Comprehension:

ਹੇਠ ਲਿਖੇ ਪੈਰੇ ਨੂੰ ਧਿਆਨ ਨਾਲ ਪੜ੍ਹੋ ਤੇ ਹੇਠਾਂ ਦਿੱਤੇ ਪ੍ਰਸ਼ਨਾਂ ਦੇ ਉੱਤਰ ਦਿਉ -

ਸਾਡੀ ਜਮਾਤ ਵਿਚ ਇਕ ਮੁੰਡਾ ਹੁੰਦਾ ਸੀ ਜਿਸ ਨੂੰ ਸਾਰੇ ਛੇੜਦੇ ਹੁੰਦੇ ਸਨ। ਮੈਂ ਉਸ ਉੱਪਰ ਇਕ ਨਜ਼ਮ ਲਿਖੀ। ਉਹ ਮੈਂ ਕਲਾਸ ਵਿਚ ਸੁਣਾਈ ਜਦ ਮੁੰਡਾ ਉੱਥੇ ਨਹੀਂ ਸੀ। ਇਕ ਜਮਾਤੀ ਨੇ ਮੈਥੋਂ ਉਹ ਲੈ ਕੇ ਉਤਾਰਾ ਕਰ ਲਿਆ ਤੇ ਮਗਰੋਂ ਉਸ ਮੁੰਡੇ ਨੂੰ ਜਾ ਦਿੱਤਾ। ਉਸ ਨੇ ਅੱਗੋਂ ਉਹ ਵਰਕਾ ਮਾਸਟਰ ਮੌਲਾ ਬਖ਼ਸ਼ ਹੋਰਾਂ ਨੂੰ ਜਾ ਦਿੱਤਾ। ਉਹ ਮਾਸਟਰ ਜੀ ਅਨੁਸ਼ਾਸਨ ਵਜੋਂ ਸਾਰੇ ਸਕੂਲ ਵਿਚ ਮੰਨੇ ਹੋਏ ਸਨ। ਉਹ ਵਰਕਾ ਪੜ੍ਹਦਿਆਂ ਹੀ ਉਨ੍ਹਾਂ ਮੈਨੂੰ ਸੱਦ ਘੱਲਿਆ। ਮੈਂ ਪਹੁੰਚਿਆ ਤਾਂ ਉਨ੍ਹਾਂ ਦੇ ਹੱਥ ਵਿਚ ਵਰਕਾ ਦੇਖ ਕੇ ਮੇਰੇ ਤਾਂ ਸੋਤਰ ਸੁੱਕ ਗਏ। ਮੈਂ ਨੀਵੀਂ ਪਾਈ ਖਲੋਤਾਂ ਸਾਂ। ਉਨ੍ਹਾਂ ਮੇਰਾ ਮੂੰਹ ਉੱਪਰ ਚੁੱਕਿਆ ਤੇ ਮੈਨੂੰ ਪੁੱਛਿਆ, "ਇਹ ਤੂੰ ਲਿਖਿਆ?" ਮੈਂ ਨੀਵੀਂ ਪਾ ਲਈ ਤੇ ਸਿਰ ਹਿਲਾ ਕੇ "ਹਾਂ" ਵਿਚ ਜਵਾਬ ਦੇ ਦਿੱਤਾ। ਉਨ੍ਹਾਂ ਮੇਰੀ ਪਿੱਠ 'ਤੇ ਹੱਥ ਫੇਰਿਆ ਤੇ ਬੜੇ ਦਰਦ ਭਰੇ ਲਹਿਜ਼ੇ ਨਾਲ ਕਿਹਾ, "ਓਏ ਕਮਬਖ਼ਤਾ! ਅੱਲਾ ਤਾਅਲਾ ਦਾ ਤੇਰੇ 'ਤੇ ਐਡਾ ਕਰਮ ਹੋਇਆ, ਤੈਨੂੰ ਸਾਇਰੀ ਦੀ ਨਿਆਮਤ ਬਖ਼ਸ਼ੀ ਤੇ ਤੂੰ ਕਾਲੇ ਲੇਖ ਲਿਖਣੇ ਸ਼ੁਰੂ ਕਰ ਦਿੱਤੇ। ਤੋਬਾ ਕਰ, ਮੁੜ ਕਦੇ ਕਾਲੇ ਅੱਖਰ ਨਹੀਂ ਲਿਖੇਗਾ।" ਉਦੋਂ ਤੋਬਾ ਦਾ ਮਤਲਬ ਸੱਚ ਮੁੱਚ ਤੋਬਾ ਹੀ ਹੁੰਦਾ ਸੀ। ਉਸ ਦਿਨ ਦੀ ਤੋਬਾ ਅੱਜ ਤੱਕ ਨਹੀਂ ਭੁੱਲੀ। ਅਸਲ ਪਛਤਾਵਾ ਹੀ ਮਨ ਦਾ ਸੰਸ਼ੋਧਨ ਕਰਦਾ ਹੈ।

SubQuestion No : 118

Q.118 ਪਹਿਲੇ ਜ਼ਮਾਨੇ ਵਿਚ ਤੋਬਾ ਦਾ ਅਸਲੀ ਮਤਲਬ ਕੀ ਹੁੰਦਾ ਸੀ?

Ans

- ✓ 1. ਗ਼ਲਤ ਕੰਮ ਬੰਦ ਕਰਨੇ
- ✗ 2. ਇੱਧਰੋਂ ਸੁਣ ਕੇ ਉੱਪਰ ਸੁੱਟ ਦੇਣਾ
- ✗ 3. ਪਰਵਾਹ ਨਾ ਕਰਨਾ
- ✗ 4. ਅਨੁਸ਼ਾਸਨ ਨੂੰ ਨਾ ਮੰਨਣਾ

Question ID : 63068047603

Status : Answered

Chosen Option : 1



Comprehension:

ਹੇਠ ਲਿਖੇ ਪੈਰੇ ਨੂੰ ਧਿਆਨ ਨਾਲ ਪੜ੍ਹੋ ਤੇ ਹੇਠਾਂ ਦਿੱਤੇ ਪ੍ਰਸ਼ਨਾਂ ਦੇ ਉੱਤਰ ਦਿਉ -

ਸਾਡੀ ਜਮਾਤ ਵਿਚ ਇਕ ਮੁੰਡਾ ਹੁੰਦਾ ਸੀ ਜਿਸ ਨੂੰ ਸਾਰੇ ਛੇੜਦੇ ਹੁੰਦੇ ਸਨ। ਮੈਂ ਉਸ ਉੱਪਰ ਇਕ ਨਜ਼ਮ ਲਿਖੀ। ਉਹ ਮੈਂ ਕਲਾਸ ਵਿਚ ਸੁਣਾਈ ਜਦ ਮੁੰਡਾ ਉੱਥੇ ਨਹੀਂ ਸੀ। ਇਕ ਜਮਾਤੀ ਨੇ ਮੈਥੋਂ ਉਹ ਲੈ ਕੇ ਉਤਾਰਾ ਕਰ ਲਿਆ ਤੇ ਮਗਰੋਂ ਉਸ ਮੁੰਡੇ ਨੂੰ ਜਾ ਦਿੱਤਾ। ਉਸ ਨੇ ਅੱਗੋਂ ਉਹ ਵਰਕਾ ਮਾਸਟਰ ਮੌਲਾ ਬਖ਼ਸ਼ ਹੋਰਾਂ ਨੂੰ ਜਾ ਦਿੱਤਾ। ਉਹ ਮਾਸਟਰ ਜੀ ਅਨੁਸ਼ਾਸਨ ਵਜੋਂ ਸਾਰੇ ਸਕੂਲ ਵਿਚ ਮੰਨੇ ਹੋਏ ਸਨ। ਉਹ ਵਰਕਾ ਪੜ੍ਹਦਿਆਂ ਹੀ ਉਨ੍ਹਾਂ ਮੈਨੂੰ ਸੱਦ ਘੱਲਿਆ। ਮੈਂ ਪਹੁੰਚਿਆ ਤਾਂ ਉਨ੍ਹਾਂ ਦੇ ਹੱਥ ਵਿਚ ਵਰਕਾ ਦੇਖ ਕੇ ਮੇਰੇ ਤਾਂ ਸੋਤਰ ਸੁੱਕ ਗਏ। ਮੈਂ ਨੀਵੀਂ ਪਾਈ ਖਲੋਤਾਂ ਸਾਂ। ਉਨ੍ਹਾਂ ਮੇਰਾ ਮੂੰਹ ਉੱਪਰ ਚੁੱਕਿਆ ਤੇ ਮੈਨੂੰ ਪੁੱਛਿਆ, "ਇਹ ਤੂੰ ਲਿਖਿਆ?" ਮੈਂ ਨੀਵੀਂ ਪਾ ਲਈ ਤੇ ਸਿਰ ਹਿਲਾ ਕੇ "ਹਾਂ" ਵਿਚ ਜਵਾਬ ਦੇ ਦਿੱਤਾ। ਉਨ੍ਹਾਂ ਮੇਰੀ ਪਿੱਠ 'ਤੇ ਹੱਥ ਫੇਰਿਆ ਤੇ ਬੜੇ ਦਰਦ ਭਰੇ ਲਹਿਜ਼ੇ ਨਾਲ ਕਿਹਾ, "ਓਏ ਕਮਬਖ਼ਤਾ! ਅੱਲਾ ਤਾਅਲਾ ਦਾ ਤੇਰੇ 'ਤੇ ਐਡਾ ਕਰਮ ਹੋਇਆ, ਤੈਨੂੰ ਸਾਇਰੀ ਦੀ ਨਿਆਮਤ ਬਖ਼ਸ਼ੀ ਤੇ ਤੂੰ ਕਾਲੇ ਲੇਖ ਲਿਖਣੇ ਸ਼ੁਰੂ ਕਰ ਦਿੱਤੇ। ਤੋਬਾ ਕਰ, ਮੁੜ ਕਦੇ ਕਾਲੇ ਅੱਖਰ ਨਹੀਂ ਲਿਖੇਗਾ।" ਉਦੋਂ ਤੋਬਾ ਦਾ ਮਤਲਬ ਸੱਚ ਮੁੱਚ ਤੋਬਾ ਹੀ ਹੁੰਦਾ ਸੀ। ਉਸ ਦਿਨ ਦੀ ਤੋਬਾ ਅੱਜ ਤੱਕ ਨਹੀਂ ਭੁੱਲੀ। ਅਸਲ ਪਛਤਾਵਾ ਹੀ ਮਨ ਦਾ ਸੰਸ਼ੋਧਨ ਕਰਦਾ ਹੈ।

SubQuestion No : 119

Q.119 ਮੁੰਡੇ ਦੇ ਮਾਸਟਰ ਦਾ ਕੀ ਨਾਂ ਸੀ?

- Ans
- ☒ 1. ਮਾਸਟਰ ਨਿਆਮਤ ਬਖ਼ਸ਼
 - ☒ 2. ਮਾਸਟਰ ਮੌਲਾ ਬਖ਼ਸ਼ ਕੁਸ਼ਤਾ
 - ☒ 3. ਆਸਤਗਫ਼ਰਿਲਾ
 - ☒ 4. ਮਾਸਟਰ ਮੌਲਾ ਬਖ਼ਸ਼

Question ID : 63068047604

Status : Answered

Chosen Option : 4



Comprehension:

ਹੇਠ ਲਿਖੇ ਪੈਰੇ ਨੂੰ ਧਿਆਨ ਨਾਲ ਪੜ੍ਹੋ ਤੇ ਹੇਠਾਂ ਦਿੱਤੇ ਪ੍ਰਸ਼ਨਾਂ ਦੇ ਉੱਤਰ ਦਿਉ -

ਸਾਡੀ ਜਮਾਤ ਵਿਚ ਇਕ ਮੁੰਡਾ ਹੁੰਦਾ ਸੀ ਜਿਸ ਨੂੰ ਸਾਰੇ ਛੇੜਦੇ ਹੁੰਦੇ ਸਨ। ਮੈਂ ਉਸ ਉੱਪਰ ਇਕ ਨਜ਼ਮ ਲਿਖੀ। ਉਹ ਮੈਂ ਕਲਾਸ ਵਿਚ ਸੁਣਾਈ ਜਦ ਮੁੰਡਾ ਉੱਥੇ ਨਹੀਂ ਸੀ। ਇਕ ਜਮਾਤੀ ਨੇ ਮੈਥੋਂ ਉਹ ਲੈ ਕੇ ਉਤਾਰਾ ਕਰ ਲਿਆ ਤੇ ਮਗਰੋਂ ਉਸ ਮੁੰਡੇ ਨੂੰ ਜਾ ਦਿੱਤਾ। ਉਸ ਨੇ ਅੱਗੋਂ ਉਹ ਵਰਕਾ ਮਾਸਟਰ ਮੌਲਾ ਬਖ਼ਸ਼ ਹੋਰਾਂ ਨੂੰ ਜਾ ਦਿੱਤਾ। ਉਹ ਮਾਸਟਰ ਜੀ ਅਨੁਸ਼ਾਸਨ ਵਜੋਂ ਸਾਰੇ ਸਕੂਲ ਵਿਚ ਮੰਨੇ ਹੋਏ ਸਨ। ਉਹ ਵਰਕਾ ਪੜ੍ਹਦਿਆਂ ਹੀ ਉਨ੍ਹਾਂ ਮੈਨੂੰ ਸੱਦ ਘੱਲਿਆ। ਮੈਂ ਪਹੁੰਚਿਆ ਤਾਂ ਉਨ੍ਹਾਂ ਦੇ ਹੱਥ ਵਿਚ ਵਰਕਾ ਦੇਖ ਕੇ ਮੇਰੇ ਤਾਂ ਸੋਤਰ ਸੁੱਕ ਗਏ। ਮੈਂ ਨੀਵੀਂ ਪਾਈ ਖਲੋਤਾਂ ਸਾਂ। ਉਨ੍ਹਾਂ ਮੇਰਾ ਮੂੰਹ ਉੱਪਰ ਚੁੱਕਿਆ ਤੇ ਮੈਨੂੰ ਪੁੱਛਿਆ, "ਇਹ ਤੂੰ ਲਿਖਿਆ?" ਮੈਂ ਨੀਵੀਂ ਪਾ ਲਈ ਤੇ ਸਿਰ ਹਿਲਾ ਕੇ "ਹਾਂ" ਵਿਚ ਜਵਾਬ ਦੇ ਦਿੱਤਾ। ਉਨ੍ਹਾਂ ਮੇਰੀ ਪਿੱਠ 'ਤੇ ਹੱਥ ਫੇਰਿਆ ਤੇ ਬੜੇ ਦਰਦ ਭਰੇ ਲਹਿਜ਼ੇ ਨਾਲ ਕਿਹਾ, "ਓਏ ਕਮਬਖ਼ਤਾ! ਅੱਲਾ ਤਾਅਲਾ ਦਾ ਤੇਰੇ 'ਤੇ ਐਡਾ ਕਰਮ ਹੋਇਆ, ਤੈਨੂੰ ਸਾਇਰੀ ਦੀ ਨਿਆਮਤ ਬਖ਼ਸ਼ੀ ਤੇ ਤੂੰ ਕਾਲੇ ਲੇਖ ਲਿਖਣੇ ਸ਼ੁਰੂ ਕਰ ਦਿੱਤੇ। ਤੋਬਾ ਕਰ, ਮੁੜ ਕਦੇ ਕਾਲੇ ਅੱਖਰ ਨਹੀਂ ਲਿਖੇਗਾ।" ਉਦੋਂ ਤੋਬਾ ਦਾ ਮਤਲਬ ਸੱਚ ਮੁੱਚ ਤੋਬਾ ਹੀ ਹੁੰਦਾ ਸੀ। ਉਸ ਦਿਨ ਦੀ ਤੋਬਾ ਅੱਜ ਤੱਕ ਨਹੀਂ ਭੁੱਲੀ। ਅਸਲ ਪਛਤਾਵਾ ਹੀ ਮਨ ਦਾ ਸੰਸ਼ੋਧਨ ਕਰਦਾ ਹੈ।

SubQuestion No : 120

Q.120 'ਸੋਤਰ ਸੁੱਕਣਾ' ਸ਼ਬਦ ਤੋਂ ਕੀ ਭਾਵ ਹੈ?

Ans

- ☒ 1. ਖੂਨ ਸੁੱਕਣਾ
- ☒ 2. ਮੂੰਹ ਸੁੱਕਣਾ
- ☒ 3. ਪਾਈ ਸੁੱਕਣਾ
- ☒ 4. ਸਾਹ ਸੁੱਕਣਾ

Question ID : 63068047605

Status : Answered

Chosen Option : 4

Q.121 Who is considered as father of markup languages?

Ans

- ☒ 1. DoryrasEngelbart
- ☒ 2. Charles Godfarb
- ☒ 3. Jack Miles
- ☒ 4. Sir Tim Berners - Lee

Question ID : 63068047294

Status : Answered

Chosen Option : 4

Q.122 Which of the following is /are correct regarding XML?

- I. XML is not a replacement of HTML.
- II. XML can make data more useful.

Ans ☒ 1. Both I and II
☐ 2. Only II
☐ 3. Only I
☐ 4. Neither I nor II

Question ID : 63068047308

Status : Answered

Chosen Option : 1

Q.123 Which of the following is/are correct about "OTT app or service"?

- I. WhatsApp or iMessage for messages on a mobile device.
- II. Xbox 360 or world of warcraft for gaming.

Ans ☐ 1. Neither I nor II
☐ 2. Only II
☐ 3. Only I
☒ 4. Both I and II

Question ID : 63068047410

Status : Answered

Chosen Option : 4

Q.124 Consider the following directory entry as shown in figure.

File Name	Type and size	Location info	Protection info	Open count	Lock	Flags	Misc info

When the open count and lock field are used in this directory entry?

Ans ☐ 1. When several process executing individually
☐ 2. When one process request another process to open a file
☐ 3. When one process open file
☒ 4. When several process open a file concurrently

Question ID : 63068047277

Status : Answered

Chosen Option : 4

Q.125 Storage capacity of optical disk = _____.

Ans ☐ 1. Number of surface \times Number of tracks \times Number of sector
☐ 2. Number of surface \times Number of bytes per sector
☒ 3. Number of sectors \times Number of byte per sector
☐ 4. Number of tracks \times Number of sector

Question ID : 63068047195

Status : Answered

Chosen Option : 3

Q.126 Which of the following pair/s is /are correct?

I. Batch processing operating system – User has full interaction with program during its execution.

II. Time sharing – User has no interaction with program during its execution.

- Ans
- ☒ 1. Both I and II
 - ☒ 2. Only I
 - ☒ 3. Only II
 - ☒ 4. Neither I nor II

Question ID : 63068047268

Status : Answered

Chosen Option : 4

Q.127 Which of the following is/are presentation view type/types in MS PowerPoint 2019?

I. Notes Page

II. Reading View

- Ans
- ☒ 1. Only II
 - ☒ 2. Only I
 - ☒ 3. Neither I nor II
 - ☒ 4. Both I and II

Question ID : 63068047243

Status : Answered

Chosen Option : 3

Q.128 Before using a new mobile phone, which of the following steps should be followed?

I. Record the IMEI number

II. Read manufacturer's manual carefully

- Ans
- ☒ 1. Both I and II
 - ☒ 2. Only II
 - ☒ 3. Neither I nor II
 - ☒ 4. Only I

Question ID : 63068047382

Status : Answered

Chosen Option : 1

Q.129 Blogger is a service provided by ____.

- Ans
- ☒ 1. Duck Duck Go
 - ☒ 2. Bing
 - ☒ 3. Yandex
 - ☒ 4. Google

Question ID : 63068047356

Status : Answered

Chosen Option : 4

Q.130 Charts icon is found in which tab of MS Excel 2019?

- Ans
- ☒ 1. Data
 - ☒ 2. Insert
 - ☒ 3. Page Layout
 - ☒ 4. Home

Question ID : 63068047236

Status : Answered

Chosen Option : 4

Q.131 Which of the following is /are not guidelines for mitigation against mobile application and operating system attacks?

- I. Never install applications from trusted sources.
- II. Upgrade the operating system to its latest version

Ans ☒ 1. Both I and II
☒ 2. Only I
☒ 3. Only II
☒ 4. Neither I nor II

Question ID : 63068047383
Status : Answered
Chosen Option : 3

Q.132 Which of the pair of search engine – type is correct?

Ans ☒ 1. DMOZ – Meta search engine
☒ 2. Hotbot – Primary search engine
☒ 3. Looksmart – Meta search engine
☒ 4. Google – Primary search engine

Question ID : 63068047321
Status : Answered
Chosen Option : 4

Q.133 In MS Excel 2019, which shortcut key is used to fill the cell with contents of the cell above?

Ans ☒ 1. Ctrl + D
☒ 2. Alt + D
☒ 3. Alt + I
☒ 4. Ctrl + I

Question ID : 63068047223
Status : Answered
Chosen Option : 3

Q.134 In MS Word 2019, watermark can be accessed from which tab?

Ans ☒ 1. Layout
☒ 2. Design
☒ 3. Home
☒ 4. View

Question ID : 63068047202
Status : Answered
Chosen Option : 1

Q.135 Which of the following is a correct representation of web address?

Ans ☒ 1. http://www.abc.com
☒ 2. http-//www.abc.com
☒ 3. http*/www.abc.com
☒ 4. http|//www.abc.com

Question ID : 63068047292
Status : Answered
Chosen Option : 1

Q.136 Actual execution of instruction takes place in the ____ of a computer system.

- Ans ☒ 1. ALU
☒ 2. Memory unit
☒ 3. Output unit
☒ 4. Input unit

Question ID : 63068045382
Status : Answered
Chosen Option : 2

Q.137 Which of the following holds the ROM, CPU, RAM and expansion cards?

- Ans ☒ 1. Hard disk
☒ 2. Motherboard
☒ 3. Bus
☒ 4. Floppy disk

Question ID : 63068047645
Status : Answered
Chosen Option : 2

Q.138 Which input device is used to evaluate objective type test?

- Ans ☒ 1. OMR
☒ 2. Mouse
☒ 3. MICR
☒ 4. OCR

Question ID : 63068047146
Status : Answered
Chosen Option : 1

Q.139 In 'http' what does 'p' stands for?

- Ans ☒ 1. Primary
☒ 2. Protocol
☒ 3. Page
☒ 4. Program

Question ID : 63068047291
Status : Answered
Chosen Option : 2

Q.140 In MS PowerPoint 2019, which of the following pair/s of function – tabs is/ are correct?

- I. Table – Insert
II. Chart – Design

- Ans ☒ 1. Only I
☒ 2. Both I and II
☒ 3. Neither I nor II
☒ 4. Only II

Question ID : 63068047256
Status : Answered
Chosen Option : 2

Q.141 Which of the following statements is/ are correct regarding VDT?

- I. It can be an input device
- II. It is an output device

Ans ☒ 1. Only II
☒ 2. Neither I nor II
☒ 3. Both I and II
☒ 4. Only I

Question ID : 63068047169

Status : Answered

Chosen Option : 1

Q.142 Which of the following is/are commonly used algorithms of search agent in search engines?

- I. Boolean operator
- II. Data clustering algorithms
- III. Error correction algorithms

Ans ☒ 1. I, II and III
☒ 2. I and II
☒ 3. I and III
☒ 4. II and III

Question ID : 63068047340

Status : Answered

Chosen Option : 4

Q.143 Which of the following pair/s of type – applications of Web 2.0 is / are correct?

- I. Social Networking – Twitter
- II. Interactive Web – Flickr

Ans ☒ 1. Both I and II
☒ 2. Neither I nor II
☒ 3. Only I
☒ 4. Only II

Question ID : 63068047305

Status : Answered

Chosen Option : 3

Q.144 How short message services can be used for delivering distance learning programmes?

- I. To provide content support such as hint, tips, lists and summaries.
- II. To provide encouragement and motivation.

Ans ☒ 1. Only II
☒ 2. Both I and II
☒ 3. Only I
☒ 4. Neither I nor II

Question ID : 63068047393

Status : Answered

Chosen Option : 1

Q.145 Which of the below given statements is/ are correct regarding Input /Output device?

I. It matches the speed of processor

II. It is very slow as compared to primary storage

- Ans
- ☒ 1. Both I and II
 - ☒ 2. Neither I nor II
 - ☒ 3. Only II
 - ☒ 4. Only I

Question ID : 63068047155

Status : Answered

Chosen Option : 2

Q.146 What is the full form of STL in 3D printing technology?

- Ans
- ☒ 1. STereoLithography
 - ☒ 2. Static Text Logic
 - ☒ 3. Sequential Textual Logic
 - ☒ 4. Serial Technique Language

Question ID : 63068047182

Status : Answered

Chosen Option : 1

Q.147 UNIX has been written in ____.

- Ans
- ☒ 1. C++
 - ☒ 2. C
 - ☒ 3. Scala
 - ☒ 4. .Net

Question ID : 63068047271

Status : Answered

Chosen Option : 4

Q.148 Which of the following pair of Keystroke – function is correct for MS Word 2019?

I. Page up – Moves cursor to the top of preceding page

II. Ctrl + page up – moves cursor up one screen

- Ans
- ☒ 1. Only II
 - ☒ 2. Both I and II
 - ☒ 3. Neither I nor II
 - ☒ 4. Only I

Question ID : 63068047209

Status : Answered

Chosen Option : 1

Q.149 Which of the following pair/s is/are correct?

I. UNIX operating system – Fourth generation computer

II. World wide web – Fifth generation computer

III. C++ programming language – Fourth generation computer

- Ans
- ☒ 1. I and III
 - ☒ 2. I, II and III
 - ☒ 3. II and III
 - ☒ 4. I and II

Question ID : 63068047140

Status : Answered

Chosen Option : 1

Q.150 Personal computers were introduced in which generation?

- Ans
- ☐ 1. Fifth
 - ☐ 2. Third
 - ☒ 3. Fourth
 - ☐ 4. Second

Question ID : 63068047121

Status : Answered

Chosen Option : 3



Teachingninja.in