



Teachingninja.in



Latest Govt Job updates



Private Job updates



Free Mock tests available

Visit - teachingninja.in





PUNJAB POLICE

Police to its last particle is duty

Exam Name	INTELLIGENCE ASSISTANT IN INTELLIGENCE CADRE OF PUNJAB POLICE AND CONSTABLE IN INVESTIGATION CADRE OF PUNJAB POLICE (PBI)- 2021
Registration Number	
Application No	
Roll No	
Name of Candidate	
Exam Date	08/09/2021
Shift	9:00 AM - 12:00 PM
Subject	Intelligence Assistant In Intelligence Cadre And Constable In Investigation Cadre

Section : Intelligence Assistant In Intelligence Cadre And Constable In Investigation Cadre

Q.1 Which of the following is used to achieve connection to the Internet without a direct cable between device and Internet Service Provider?

- Ans
- ☒ 1. Ethernet
 - ☒ 2. Cable television
 - ☒ 3. WIFI
 - ☒ 4. Telephone networks

Question ID : 63068046569

Status : Answered

Chosen Option : 3

Q.2 According to the Population census 2011, what was the percentage of the Buddhist population in India?

- ns
- ☒ 1. 2.80
 - ☒ 2. 0.08
 - ☒ 3. 1.80
 - ☒ 4. 0.7

Question ID : 63068039128

Status : nswered

Chosen Option :

Q.3 Who founded the Gurudwara Guru Ka Mahal?

- Ans
- ☐ 1. Maharaja Narinder Singh
 - ☒ 2. Guru Ram Das
 - ☐ 3. Maharaja Ranjit Singh
 - ☐ 4. Dewan Mokham Chand

Question ID : 63068046718
Status : Answered
Chosen Option : 1

Q.4 The zonal master plan has been approved for the Bhagirathi eco-sensitive zone in July 2020. Where is this zone located?

- Ans
- ☐ 1. Madhya Pradesh
 - ☐ 2. Uttar Pradesh
 - ☐ 3. Haryana
 - ☒ 4. Uttarakhand

Question ID : 63068046504
Status : Answered
Chosen Option : 4

Q.5 NASA is partnering with which space agency for the JUICE mission?
I. Indian Space Research Organisation
II. European Space Agency

- Ans
- ☒ 1. Only II
 - ☐ 2. Neither I nor II
 - ☐ 3. Only I
 - ☐ 4. Both I and II

Question ID : 63068046541
Status : Answered
Chosen Option : 4

Q.6 In May 2021, United Nations predicted India's GDP to grow by what percentage in 2021?

- Ans
- ☐ 1. 5.3 percent
 - ☐ 2. 13.4 percent
 - ☒ 3. 7.5 percent
 - ☐ 4. 10.9 percent

Question ID : 63068046522
Status : Answered
Chosen Option : 4

Q.7 Which of the following options was the established basis of direct election?

- Ans
- ☐ 1. Block Committee
 - ☐ 2. Nyaya Panchayat
 - ☐ 3. Zila Parishad
 - ☒ 4. Gram Panchayat

Question ID : 63068046834
Status : Answered
Chosen Option : 1

Q.8 Upto how much amount does Punjab Crop Loan Waiver Scheme waives for each farmer?

- Ans
- ☐ 1. 3 lakh rupees
 - ☐ 2. 50 thousand rupees
 - ☐ 3. 1 lakh rupees
 - ☒ 4. 2 lakh rupees

Question ID : 63068046744
Status : Answered
Chosen Option : 2

Q.9 Pongal festival 2021 was celebrated for ____.

- Ans
- ☐ 1. six days
 - ☐ 2. two days
 - ☒ 3. four days
 - ☐ 4. one day

Question ID : 63068046457
Status : Answered
Chosen Option : 2

Q.10 Which festival commemorates the Battle of Muktsar where the Chalis Mukte or the forty beloved died?

- Ans
- ☐ 1. Sipanji
 - ☐ 2. Holla Mohalla
 - ☐ 3. Parkash Utsav Dasveh Patshah
 - ☒ 4. Muktsar Mela

Question ID : 63068046711
Status : Answered
Chosen Option : 4

Q.11 Which was the first Satyagraha movement led by Gandhi in India and regarded a historically significant revolt in the Indian Independence Movement?

- Ans
- ☒ 1. Khilafat Movement
 - ☒ 2. Kheda Satyagraha
 - ☒ 3. Champaran Satyagraha
 - ☒ 4. Salt Satyagraha

Question ID : 63068039302
Status : Answered
Chosen Option : 3

Q.12 According to the constitution of India, every Panchayat, unless sooner dissolved under any law for the time being in force, shall continue for _____ years from the date appointed for its first meeting and no longer.

- Ans
- ☒ 1. six
 - ☒ 2. five
 - ☒ 3. four
 - ☒ 4. three

Question ID : 63068043545
Status : Answered
Chosen Option : 2

Q.13 The Ministry of Agriculture has declared _____ as India's first Union Territory to become a 100% organic region.

- Ans
- ☒ 1. Chandigarh
 - ☒ 2. Puducherry
 - ☒ 3. Delhi
 - ☒ 4. Lakshadweep

Question ID : 63068046799
Status : Answered
Chosen Option : 4

Q.14 TV ਪ੍ਰੋਗਰਾਮ _____ ਦੀ ਵਰਤੋਂ ਕਰਦੇ ਹੋਏ ਕਮਿਊਨਿਕੇਸ਼ਨ ਸੈਟੇਲਾਈਟ ਦੁਆਰਾ ਸੰਚਾਰਿਤ ਕੀਤੇ ਜਾਂਦੇ ਹਨ।

- Ans
- ☒ 1. ਗਾਈਡਡ ਮਾਈਕ੍ਰੋਵੇਵ ਪ੍ਰੋਪੇਗੇਸ਼ਨ
 - ☒ 2. LOS ਮਾਈਕ੍ਰੋਵੇਵ ਪ੍ਰੋਪੇਗੇਸ਼ਨ
 - ☒ 3. ਸਕੈਟਰ ਪ੍ਰੋਪੇਗੇਸ਼ਨ
 - ☒ 4. ਸਕਾਈ ਵੇਵ ਪ੍ਰੋਪੇਗੇਸ਼ਨ

Question ID : 63068046578
Status : Answered
Chosen Option : 3

Q.15 Which of the following statements is NOT true about Advocate General?

- Ans
- ☒ 1. The Advocate General has the right to speak and take part in the proceedings of the State Legislature without the right to vote.
 - ☒ 2. The Advocate General must be qualified to be appointed as a judge of the High Court.
 - ☒ 3. The Advocate General's duty is to give advice to State Government on legal matter and to perform duties of legal character which are assigned to him by the Governor.
 - ☒ 4. There is an Advocate General for each state, appointed by the Chief Minister.

Question ID : 63068046824

Status : Answered

Chosen Option : 4

Q.16 Under which Amendment was the linguistic division for the creation of states introduced in the Indian Constitution?

- Ans
- ☒ 1. 7th Amendment
 - ☒ 2. 9th Amendment
 - ☒ 3. 8th Amendment
 - ☒ 4. 6th Amendment

Question ID : 63068044083

Status : Answered

Chosen Option : 1

Q.17 _____ is the transferring of a call from the channel or base station to another base station.

- Ans
- ☒ 1. Sender
 - ☒ 2. Receiver
 - ☒ 3. Roamer
 - ☒ 4. Handoff

Question ID : 63068046565

Status : Answered

Chosen Option : 4

Q.18 Joe Biden named as the 2020 TIME's Person of the Year. He is the president of which country?

- Ans
- ☒ 1. South Africa
 - ☒ 2. Russia
 - ☒ 3. France
 - ☒ 4. The US

Question ID : 63068046548

Status : Answered

Chosen Option : 4

Q.19 'Hola Mohalla' festival was celebrated in March 2021. It is an important Indian festival of _____.

- Ans
- ☐ 1. Hindu
 - ☐ 2. Jain
 - ☐ 3. Muslim
 - ☒ 4. Sikh

Question ID : 63068046448

Status : Answered

Chosen Option : 4

Q.20 The additional RAM chips, which plug into special sockets on the motherboard, are known as_____.

- Ans
- ☐ 1. multiple-in-line memory modules (MIMMs)
 - ☐ 2. parallel-in-line memory modules (PIMMs)
 - ☐ 3. single-out-line memory modules (SOMMs)
 - ☒ 4. single-in-line memory modules (SIMMs)

Question ID : 63068046622

Status : Answered

Chosen Option : 1

Q.21 What is literacy rate of Punjab in 2011 census?

- Ans
- ☐ 1. 63.98
 - ☐ 2. 96.24
 - ☒ 3. 75.84
 - ☐ 4. 82.28

Question ID : 63068046773

Status : Answered

Chosen Option : 3

Q.22 What percentage of population in rural areas is covered under National Food Security Act, 2013 ?

- Ans
- ☐ 1. 50%
 - ☐ 2. 100%
 - ☐ 3. 60%
 - ☒ 4. 75%

Question ID : 63068021786

Status : Answered

Chosen Option : 3

Q.23 Sustainable agriculture is also known as ____.

- Ans
- ☒ 1. land rotation
 - ☒ 2. Ecological farming
 - ☒ 3. jhuming
 - ☒ 4. site specific farming

Question ID : 63068046598
Status : Answered
Chosen Option : 2

Q.24 Coaxial cable are____.

- Ans
- ☒ 1. Copper cables
 - ☒ 2. Bronze cables
 - ☒ 3. Gold cables
 - ☒ 4. Aluminium cables

Question ID : 63068046571
Status : Answered
Chosen Option : 1

Q.25 Which article of Indian constitution is related with the Supreme court to be a court of record?

- Ans
- ☒ 1. 132
 - ☒ 2. 131
 - ☒ 3. 130
 - ☒ 4. 129

Question ID : 63068043537
Status : Answered
Chosen Option : 1

Q.26 ਨਿਕਾਸੀ ਦੀ ਸੁਵਿਧਾ ਦੀ ਮੁੱਖ ਤੌਰ 'ਤੇ ਕਿਹੜੀ ਮਿੱਟੀ ਵਿੱਚ ਲੋੜ ਪੈਂਦੀ ਹੈ?

- Ans
- ☒ 1. ਕਾਲੀ ਮਿੱਟੀ
 - ☒ 2. ਦਲਦਲੀ ਅਤੇ ਜਿਲੜ ਮਿੱਟੀ
 - ☒ 3. ਲੈਟਰਾਈਟ ਮਿੱਟੀ
 - ☒ 4. ਜਲੇਤ੍ਰ ਮਿੱਟੀ

Question ID : 63068046602
Status : Answered
Chosen Option : 3

Q.27 Which Article of the Constitution of India states that election to the House of the People and to the Legislative Assemblies of States must be on the basis of adult suffrage?

- Ans
- ☒ 1. Article 368
 - ☒ 2. Article 393
 - ☒ 3. Article 326
 - ☒ 4. Article 369

Question ID : 63068021805
Status : Answered
Chosen Option : 3

Q.28 Which Article of the Constitution of India provides for appointment of the Comptroller and Auditor General of India?

- Ans
- ☒ 1. Article 148
 - ☒ 2. Article 69
 - ☒ 3. Article 152
 - ☒ 4. Article 102

Question ID : 63068026520
Status : Answered
Chosen Option : 1

Q.29 Dwarka is an ancient city in which of the following Indian states?

- Ans
- ☒ 1. Odisha
 - ☒ 2. Maharashtra
 - ☒ 3. Uttar Pradesh
 - ☒ 4. Gujarat

Question ID : 63068021118
Status : Answered
Chosen Option : 1

Q.30 Which of the following is correctly matched?
I. 67th Grandmaster of India- Arjun Kalyan
II. 68th Grandmaster Of India- Leon Mendonca

- Ans
- ☒ 1. Only I
 - ☒ 2. Only II
 - ☒ 3. Neither I nor II
 - ☒ 4. Both I and II

Question ID : 63068046489
Status : Answered
Chosen Option : 1

Q.31 A pendulum oscillates 300 times in 100 seconds. Find its time period.

- Ans
- ☐ 1. 0.6 s
 - ☐ 2. 0.25 s
 - ☒ 3. 0.33 s
 - ☐ 4. 0.45 s

Question ID : 63068046635
Status : Answered
Chosen Option : 1

Q.32 Contact force is also known as_____.

- Ans
- ☐ 1. Non-contact force
 - ☒ 2. Muscular force
 - ☐ 3. Gravitational force
 - ☐ 4. Magnetic force

Question ID : 63068046634
Status : Answered
Chosen Option : 2

Q.33 Who among the following launched the 'Atmanirbharta Saptah' in August 2020?

- Ans
- ☐ 1. Prakash Javadekar
 - ☐ 2. Amit Shah
 - ☐ 3. Piyush Goel
 - ☒ 4. Rajnath Singh

Question ID : 63068046508
Status : Answered
Chosen Option : 3

Q.34 Which of the following statements regarding the 'Forbes' World's Billionaires List 2021' is correct?

- I. Elon Musk has acquired the top position.
II. Mukesh Ambani has acquired the 5th position.

- Ans
- ☐ 1. Both I and II
 - ☐ 2. Only I
 - ☒ 3. Neither I nor II
 - ☐ 4. Only II

Question ID : 63068046555
Status : Answered
Chosen Option : 2

Q.35 Chhath Puja festival was celebrated in November 2020. This festival is dedicated to _____.

- Ans
- ☐ 1. Lord Indra
 - ☐ 2. Lord Vayu
 - ☒ 3. Lord Surya
 - ☐ 4. Lord Agni

Question ID : 63068046447
Status : Answered
Chosen Option : 4

Q.36 As per Indian monuments and their builders/establishers, which one of the following pairs is INCORRECT?

- Ans
- ☐ 1. Agra Fort – Akbar
 - ☒ 2. Buland Darwaza – Babur
 - ☐ 3. Bada Imambara – Asaf-ud-daula
 - ☐ 4. Jama Masjid – Shahjahan

Question ID : 63068021075
Status : Answered
Chosen Option : 4

Q.37 Radio broadcast satellite is an example of which satellite system?

- Ans
- ☐ 1. Low Earth Orbit
 - ☐ 2. High Earth Orbit
 - ☒ 3. Geostationary Earth Orbit
 - ☐ 4. Medium Earth Orbit

Question ID : 63068046570
Status : Answered
Chosen Option : 3

Q.38 In which year did Prime Minister Rajiv Gandhi sign a peace accord with Sikh leader Harchand Singh Longowal to settle the three-year Punjab crisis?

- Ans
- ☐ 1. 1984
 - ☒ 2. 1985
 - ☐ 3. 1987
 - ☐ 4. 1986

Question ID : 63068046697
Status : Answered
Chosen Option : 3

Q.39 The Central Act for 'Right to Information' was passed by the Indian Parliament on _____.

- Ans
- ☒ 1. 14 May 2007
 - ☒ 2. 18 August 2005
 - ☒ 3. 20 May 2008
 - ☒ 4. 12 May 2005

Question ID : 63068046793
Status : Answered
Chosen Option : 4

Q.40 Appointments and promotion of District judges in any State shall be made by the _____ of the State in consultation with the High Court exercising Jurisdiction in relation to such state.

- Ans
- ☒ 1. Chief Minister
 - ☒ 2. Home Minister
 - ☒ 3. Prime Minister
 - ☒ 4. Governor

Question ID : 63068046813
Status : Answered
Chosen Option : 4

Q.41 One out of the ten doctors working in a clinic retires. A new doctor, whose age is 27 years, replaces the retired doctor. As a consequence, the average age of the doctors reduces by 3 years. Calculate the age (in years) of the retired doctor.

- Ans
- ☒ 1. 57
 - ☒ 2. 60
 - ☒ 3. 55
 - ☒ 4. 58

Question ID : 63068042652
Status : Answered
Chosen Option : 1

Q.42 The bar graph given below shows the number of three different bikes sold by Enfield motors during the last 4 years.
Find the ratio between the numbers of Classic 500 bikes sold to the number of thunderbirds sold for the given period.



- Ans
- ☒ 1. 27:25
 - ☒ 2. 23:21
 - ☒ 3. 25:22
 - ☒ 4. 29:24

Question ID : 63068047638

Status : Answered

Chosen Option : 4

Q.43 Which of the following numbers is NOT divisible by 4?

- Ans
- ☒ 1. 264
 - ☒ 2. 268
 - ☒ 3. 200
 - ☒ 4. 262

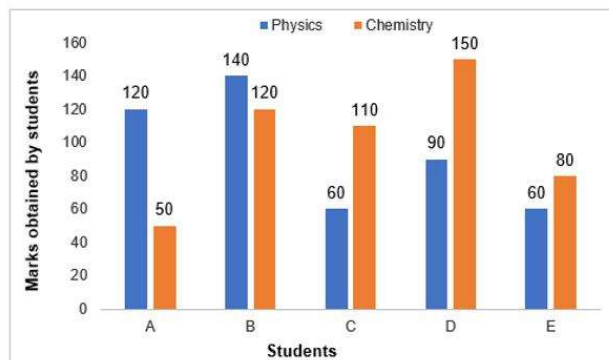
Question ID : 63068040390

Status : Answered

Chosen Option : 4



Q.44 The bar graph given below shows the marks obtained by five students A, B, C, D and E in physics and chemistry. Marks obtained by C in chemistry is approximately what percent of the total marks obtained by all the students in chemistry?



- Ans
- ☒ 1. 20%
 - ☒ 2. 32%
 - ☒ 3. 22%
 - ☒ 4. 41%

Question ID : 63068047640

Status : Answered

Chosen Option : 3

Q.45 A sum of money at simple interest amounts to ₹820 in 3 years and to ₹854 in 4 years. The sum is:

- Ans
- ☒ 1. ₹718
 - ☒ 2. ₹710
 - ☒ 3. ₹703
 - ☒ 4. ₹723

Question ID : 63068040602

Status : Answered

Chosen Option : 1

Q.46 If a swimmer is swimming with a speed 6km/h against the water current which is at speed of 2km/h, in how much time can the swimmer cover 100m?

- Ans
- ☒ 1. 100 sec
 - ☒ 2. 90 sec
 - ☒ 3. 105 sec
 - ☒ 4. 95sec

Question ID : 63068042635

Status : Answered

Chosen Option : 2

Q.47 If the annual rate of simple interest increases from 14% to 18%, a man's yearly interest income increases by Rs. 1500. What was the principal invested?

- Ans
- ☒ 1. Rs. 45300
 - ☒ 2. Rs. 37500
 - ☒ 3. Rs. 45000
 - ☒ 4. Rs. 25500

Question ID : 63068046938

Status : Answered

Chosen Option : 2

Q.48 ਇੱਕ ਜਨਮਦਿਨ ਪਾਰਟੀ ਵਿੱਚ, ਇੱਕ ਮੁੰਡੇ ਨੇ, ਦੋ ਟੁਕੜਿਆਂ ਨੂੰ ਕੱਟਣ ਲਈ ਇੱਕ ਗੋਲਾਕਾਰ ਕੇਕ ਨੂੰ ਅਰਧ-ਵਿਆਸ ਦੇ ਨਾਲ-ਨਾਲ ਹਰੇਕ ਨੂੰ 60° ਦੇ ਕੇਂਦਰੀ ਕੋਣ ਨਾਲ ਕੱਟਿਆ। ਕੇਕ ਦਾ ਕਿੰਨਾ ਭਾਗ ਹਾਲੇ ਕੱਟਿਆ ਨਹੀਂ ਗਿਆ ਹੈ?

- Ans
- ☒ 1. $\frac{1}{3}$
 - ☒ 2. $\frac{1}{2}$
 - ☒ 3. $\frac{2}{3}$
 - ☒ 4. $\frac{3}{4}$

Question ID : 63068042669

Status : Answered

Chosen Option : 3

Q.49 Price of an item is first decreased by 11%, then it is decreased by 14%. Find the percentage decline in the price of the item.

- Ans
- ☒ 1. 12%
 - ☒ 2. 23.46%
 - ☒ 3. 1.54%
 - ☒ 4. 12.78%

Question ID : 63068046895

Status : Answered

Chosen Option : 2

Q.50 A library has an average of 500 visitors on Sundays and an average of 248 visitors on other days. The average number of visitors per day in a month of 30 days beginning with a Sunday is _____.

Ans ☒ 1. 290

☐ 2. 225

☐ 3. 235

☐ 4. 287

Question ID : 63068046983

Status : Answered

Chosen Option : 1

Q.51 Abhay can do a work in 17 days and Anil can do it in 34 days. If they work together, how long will it take them to finish twice the amount of work mentioned above?

Ans ☐ 1. 77/13 days

☒ 2. 68/3 days

☐ 3. 41/11 days

☐ 4. 35/2 days

Question ID : 63068046957

Status : Answered

Chosen Option : 2

Q.52 Find the approximate area of a circle whose radius is twice the length of a diagonal of a square of area 9 cm². [Use $\pi = 22/7$]

Ans ☐ 1. 87.29 cm²

☐ 2. 222.29 cm²

☐ 3. 262.29 cm²

☒ 4. 226.29 cm²

Question ID : 63068042686

Status : Answered

Chosen Option : 4

Q.53 Find the value of b/a in the following expression?

$$\sqrt{(0.09 \times 0.9 \times a)} = 0.009 \times 0.9 \times \sqrt{b}$$

Ans ☐ 1. 9×10^3

☐ 2. 9×10^2

☒ 3. 1234.5679 (correct to 4 decimal places)

☐ 4. 123456.79

Question ID : 63068042520

Status : Answered

Chosen Option : 3

Q.54 If we square 5454, what will be the digit in its units' place?

Ans ☒ 1. 7

☒ 2. 9

☒ 3. 6

☒ 4. 8

Question ID : 63068042469

Status : Answered

Chosen Option : 3

Q.55 If the side of a square is increased by 25%, the percentage increase in the area will be:

Ans ☒ 1. 50

☒ 2. 25

☒ 3. 75

☒ 4. 56.25

Question ID : 63068026673

Status : Answered

Chosen Option : 4

Q.56 The population of a town increased from 1,50,000 to 2,25,000 in a decade. The average percent increase of population per year is_____.

Ans ☒ 1. 9%

☒ 2. 7%

☒ 3. 5%

☒ 4. 6%

Question ID : 63068046899

Status : Answered

Chosen Option : 3

Q.57 Solve the following equation:

$$3\frac{3}{4} \div \frac{3}{7} \text{ of } \left[\frac{48}{24} - \left(\frac{2}{3} + \frac{5}{6} \text{ of } \frac{2}{5} \right) \right]$$

Ans ☒ 1. $\frac{35}{4}$

☒ 2. $\frac{35}{7}$

☒ 3. $\frac{35}{2}$

☒ 4. $\frac{34}{3}$

Question ID : 63068040224

Status : Answered

Chosen Option : 1

Q.58 Find the H.C.F of $\frac{1}{4}$, $\frac{7}{12}$ and $\frac{14}{36}$

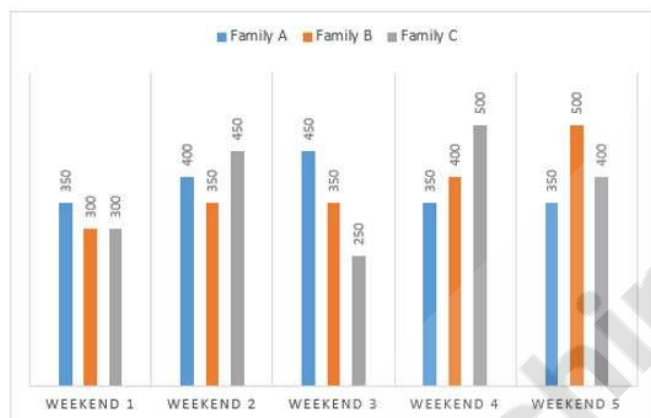
- Ans
- ☒ 1. $\frac{14}{36}$
 - ☒ 2. $\frac{7}{6}$
 - ☒ 3. $\frac{1}{36}$
 - ☒ 4. $\frac{7}{36}$

Question ID : 63068040227

Status : Answered

Chosen Option : 3

Q.59 The given bar graph shows the data of the expenses by three different families A, B and C over five different weekends.



What is the approximate percentage increase in the amount expended by family B in a weekend from the 1st to the 4th?

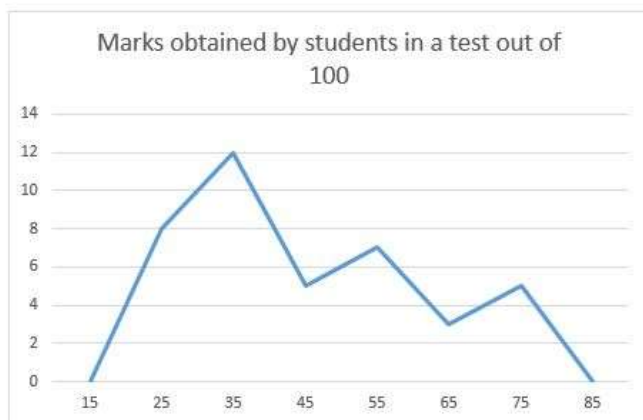
- Ans
- ☒ 1. 31%
 - ☒ 2. 33.33%
 - ☒ 3. 34%
 - ☒ 4. 33%

Question ID : 63068031396

Status : Answered

Chosen Option : 2

- Q.60 The given frequency polygon represents data obtained from a grouped frequency distribution giving test scores of examinees.



Estimate the median score of the distribution, using 5-15, 5-15, ..., as the class intervals.

- Ans
- ✓ 1. 40
 - ✗ 2. 45
 - ✗ 3. 48
 - ✗ 4. 50

Question ID : 63068040711
Status : Answered
Chosen Option : 4

- Q.61 Simplify:
 $8888 \div 101 \times 7 - 17 = ?$

- Ans
- ✓ 1. 599
 - ✗ 2. 621
 - ✗ 3. 532
 - ✗ 4. 612

Question ID : 63068046879
Status : Answered
Chosen Option : 1

- Q.62 A person lent a certain sum of money at 3% simple interest per annum and in 4 years the interest amounted to Rs.528 less than the sum lent. What was the sum lent?

- Ans
- ✗ 1. Rs. 750
 - ✓ 2. Rs. 600
 - ✗ 3. Rs. 700
 - ✗ 4. Rs. 625

Question ID : 63068046931
Status : Answered
Chosen Option : 2

Q.63 Simplify:

$$\frac{3}{2} \times 1\frac{1}{4} \div \frac{3}{7} \text{ of } 2\frac{5}{8}$$

Ans

☐ 1. $\frac{3}{5}$

☐ 2. $\frac{64}{735}$

☐ 3. $\frac{735}{64}$

☒ 4. $\frac{5}{3}$

Question ID : 63068026868

Status : Answered

Chosen Option : 4

Q.64 If $a = 0.1040$, then the value of $\sqrt{4a^2 - 4a + 1} + 4a$ is:

Ans

☐ 1. 1.2060

☐ 2. 1.2090

☒ 3. 1.2080

☐ 4. 1.1080

Question ID : 63068040400

Status : Answered

Chosen Option : 3

Q.65 A man purchased 9 Ice cream bars for Rs.160 and sold them at the rate of 11 for Rs.200. What his gain or loss percent

Ans

☐ 1. $1\frac{3}{11}\%$

☒ 2. $2\frac{3}{11}\%$

☐ 3. $2\frac{1}{11}\%$

☐ 4. 4 %

Question ID : 63068041378

Status : Answered

Chosen Option : 2

Q.66 A fruit seller had some apples. He sells 50% of the apples and still has 400 apples. How many apples did he originally have?

- Ans
- ☐ 1. 1200
 - ☐ 2. 600
 - ☐ 3. 900
 - ☒ 4. 800

Question ID : 63068046898
Status : Answered
Chosen Option : 4

Q.67 If 50% of $X + 200 = 1000$, then find X.

- Ans
- ☐ 1. 1400
 - ☒ 2. 1600
 - ☐ 3. 1800
 - ☐ 4. 2000

Question ID : 63068042559
Status : Answered
Chosen Option : 2

Q.68 Simplify:

$$30 + \{10 + 15 \text{ of } 3 - (20 + 30 - 45 \div 5)\}$$

- Ans
- ☐ 1. 55
 - ☐ 2. 23
 - ☐ 3. 65
 - ☒ 4. 44

Question ID : 63068026870
Status : Answered
Chosen Option : 4

Q.69 How many parts can be obtained from a 12.78 m long rod by cutting it in to pieces of length 21.3 dm. each

- Ans
- ☐ 1. 4
 - ☒ 2. 6
 - ☐ 3. 3
 - ☐ 4. 5

Question ID : 63068041352
Status : Answered
Chosen Option : 2

Q.70 Which of the following pairs of numbers are co-prime?

- Ans
- ☐ 1. 95 and 133
 - ☐ 2. 121 and 132
 - ☒ 3. 242 and 279
 - ☐ 4. 104 and 182

Question ID : 63068026952
Status : Answered
Chosen Option : 1

Q.71 Which one set of letters when sequentially placed in the gaps in the given letter series shall complete it?

D _ G C _ F G _ D _ _ C

- Ans
- ☐ 1. GFCDF
 - ☐ 2. CGFDC
 - ☐ 3. CFDGD
 - ☒ 4. FDCFG

Question ID : 63068047017
Status : Answered
Chosen Option : 4

Q.72 Which letter will replace the question mark (?) in the given series?

G, T, J, Q, M, ?

- Ans
- ☐ 1. S
 - ☒ 2. N
 - ☐ 3. W
 - ☐ 4. Y

Question ID : 63068046009
Status : Answered
Chosen Option : 2

Q.73 Ashok started from his house towards North. After covering a distance of 4km. He turned to his Right and covered a distance of 3km. What is shortest distance now from his house ?

- Ans
- ☐ 1. 2km
 - ☒ 2. 5km
 - ☐ 3. 6km
 - ☐ 4. 3km

Question ID : 63068038786
Status : Answered
Chosen Option : 2

Q.74 In a certain code language if LION = 50 and BEAR = 26, then GOAT = ?

Ans ☒ 1. 12

☒ 2. 43

☒ 3. 29

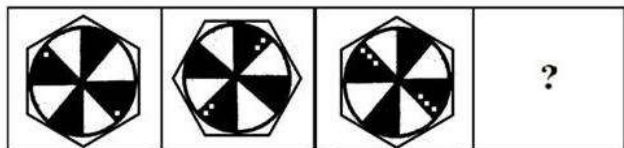
☒ 4. 67

Question ID : 63068026135

Status : Answered

Chosen Option : 2

Q.75 Select the option figure that will replace the question mark (?) in the following figure series.



Ans

☒ 1.



☒ 2.



☒ 3.



☒ 4.




Question ID : 63068038196

Status : Answered

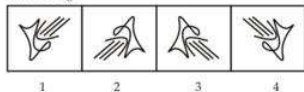
Chosen Option : 1

Q.76 Select the answer figure that is related to figure C in the same way as figure B is related to figure A.

Problem Fig.



Answer Fig.



- Ans
- ☒ 1. 3
 - ☐ 2. 1
 - ☐ 3. 2
 - ☐ 4. 4

Question ID : 63068038014

Status : Answered

Chosen Option : 1

Q.77 Select the number that can replace the question mark (?) in the following series.
2, 5, 10, 17, 26, ?

- Ans
- ☐ 1. 35
 - ☐ 2. 47
 - ☒ 3. 37
 - ☐ 4. 27

Question ID : 63068038900

Status : Answered

Chosen Option : 3

Q.78 There are six people Kirti, Kavita, Komal, Khushi, Koel and Kritika, who got different positions in a competition. Kavita got second position from top while Khushi got third position from the last. Komal's position was immediately after Kavita and immediately before Khushi. Koel does not get either the first position or the last position. Kirti also does not get the last position.

Who got the last position?

- Ans
- ☒ 1. Kritika
 - ☐ 2. Khushi
 - ☐ 3. Koel
 - ☐ 4. Kirti

Question ID : 63068045141

Status : Answered

Chosen Option : 1

Q.79 Choose the odd number pair from the given options.

- Ans ☒ 1. 857 - 1092
☒ 2. 1280 - 1515
☒ 3. 1325 - 1555
☒ 4. 278 - 513

Question ID : 63068038157
Status : Answered
Chosen Option : 3

Q.80 In a certain code language, 'PEN' is written as '1225'. How will 'NIB' be written in that code language?

- Ans ☒ 1. 425
☒ 2. 625
☒ 3. 526
☒ 4. 208

Question ID : 63068047078
Status : Answered
Chosen Option : 2

Q.81 Find the missing term in the given series:

R, O, L, _ , F

- Ans ☒ 1. J
☒ 2. G
☒ 3. I
☒ 4. H

Question ID : 63068047038
Status : Answered
Chosen Option : 3

Q.82 Select the option that can replace question mark (?) in the following series.

XYZ, XYZ2, XY2Z2, ? , X2Y2Z3

- Ans ☒ 1. X2Y2Z2
☒ 2. X3YZ3
☒ 3. XYZ3
☒ 4. X2Y3Z

Question ID : 63068038645
Status : Answered
Chosen Option : 1

Q.83 In the following question, select the odd word from the given alternatives.

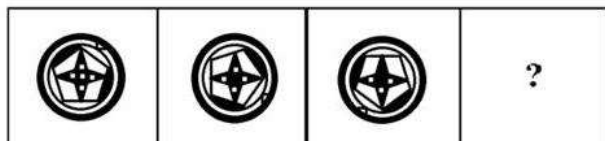
- Ans
- ☒ 1. Quantity
 - ☒ 2. Quality
 - ☒ 3. Educated
 - ☒ 4. Qualify

Question ID : 63068045044

Status : Answered

Chosen Option : 3

Q.84 Select the option figure that will replace the question mark (?) in the following figure series.



Ans

- ☒ 1.
- ☒ 2.
- ☒ 3.
- ☒ 4.

Question ID : 63068038194

Status : Answered

Chosen Option : 4

Q.85 Select the option that is related to the third number in the same way as the second number is related to the first number.
 $51 : 16 :: 62 : ?$

- Ans ☒ 1. 24
☒ 2. 16
☒ 3. 11
☒ 4. 25

Question ID : 63068038331
Status : Answered
Chosen Option : 2

Q.86 From his office, Ritesh went to 30 m towards west, then he turn north and covered 40 m, then he turn west and covered 20 m. Finally turning to the south, he covered 40 m.

How far was he from the starting point?

- Ans ☒ 1. 55 m
☒ 2. 50 m
☒ 3. 52 m
☒ 4. 45 m

Question ID : 63068045001
Status : Answered
Chosen Option : 2

Q.87 Which number will come in place of the question mark (?) in the given number series?

2, 4, 9, 11, 16, 18, ?

- Ans ☒ 1. 23
☒ 2. 27
☒ 3. 20
☒ 4. 30

Question ID : 63068026163
Status : Answered
Chosen Option : 1

Q.88 Six people – J, K, L, M, N and O are standing in a row facing north. Further, the following facts are known.

- I. O is standing at one of the extreme ends.
II. If J stands next to K, then M also stands adjacent to K.
III. J stands to the immediate left of L.

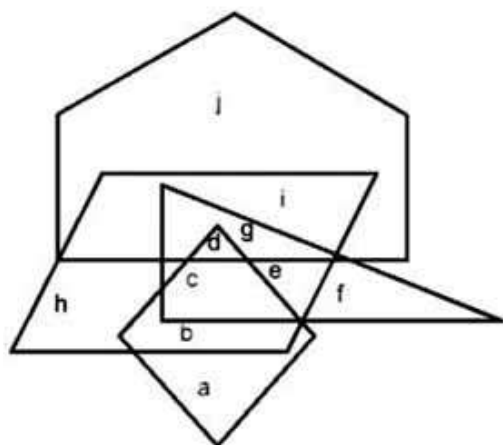
If N is fourth to the left of L and K is immediately on J's left, then who stands to the immediate right of N?

- Ans ☒ 1. J
☒ 2. K
☒ 3. M
☒ 4. O

Question ID : 63068045100
Status : Answered
Chosen Option : 3

Q.89 These questions are based on the following data.

In the Following figure, pentagon represents Horror movies, parallelogram represents Comedy movies, triangle represents Sentiment movies and rhombus represents Action movies. This information is about the people who like different types of movies.



The people who like only Action, Comedy and Sentiment movies are represented by the letter _____.

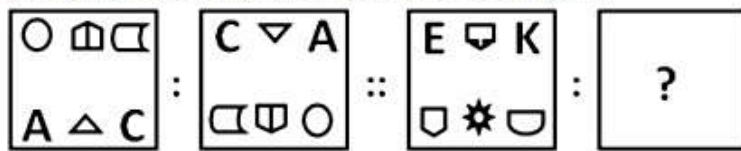
- Ans
- ☒ 1. d
 - ☒ 2. c
 - ☒ 3. b
 - ☒ 4. a

Question ID : 63068044879

Status : Answered

Chosen Option : 2

Q.90 Find the figure from the answer figure that will replace the question mark (?) from the problem figure.



Ans

- ☒ 1.
- ☒ 2.
- ☒ 3.
- ☒ 4.

Question ID : 63068045174

Status : Answered

Chosen Option : 1

Q.91 In a row of 38 persons, Arpita is 12th from the left side of the row and Mudita is 16th from the right side of the row. Find out the number of persons sitting between them.

- Ans
- ☒ 1. 9
 - ☒ 2. 7
 - ☒ 3. 10
 - ☒ 4. 8

Question ID : 63068047114

Status : Answered

Chosen Option : 3

Q.92 Find the missing letters in the pattern:

jmk_jl_mj_lmmlk_mkl_lkmj

- Ans
- ☒ 1. kllkj
 - ☒ 2. kkljm
 - ☒ 3. llkkj
 - ☒ 4. lkkjj

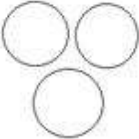
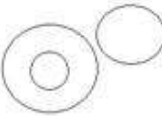


Question ID : 63068044904

Status : Answered

Chosen Option : 4

Q.93 Which of the following diagrams best depicts the relationship between Summer, Season, and Winter?

Ans

- ☒ 1. 
- ☒ 2. 
- ☒ 3. 
- ☒ 4. 

Question ID : 63068038239

Status : Answered

Chosen Option : 3

Q.94 Study the following arrangement carefully and answer the question given below:

'P + Q' means 'P is mother of Q'

'P × Q' means 'P is son of Q'

'P & Q' means 'P is sister of Q'

As per the above information, what does C + D & A mean?

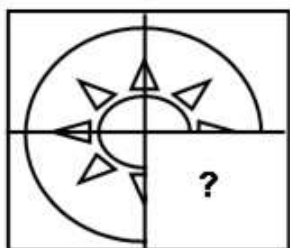
- Ans
- ☒ 1. A and D are brothers.
 - ☒ 2. A is the sister of C and D.
 - ☒ 3. C is the father of A and D.
 - ☒ 4. C is the mother of A and D.

Question ID : 63068047069

Status : Answered

Chosen Option : 4

Q.95 Which answer figure will complete the pattern in the question figure?



Ans

✗ 1.



✗ 2.



✗ 3.



✓ 4.

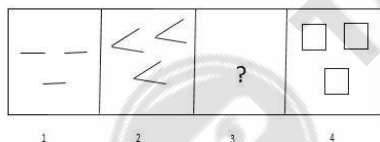


Question ID : 63068045167

Status : Answered

Chosen Option : 4

Q.96 Select an appropriate figure from the answer figures (A, B, C, D) to replace the question mark (?) in the given series.



1

2

3

4



A

B

C

D

Ans ✗ 1. B

✓ 2. C

✗ 3. A

✗ 4. D

Question ID : 63068038957

Status : Answered

Chosen Option : 2

Q.97 In the question three statements are given, followed by two conclusions, I and II. You have to consider the statement to be true even if it seems to be at variance from commonly known facts. You have to decide which of the given conclusions, if any, follows from the given statement.

Statements:

1. Some walls are painted.
2. All windows are painted.
3. Some walls are not attached.

Conclusions:

- I. Some painted are windows.
- II. All windows are attached.

- Ans
- ☒ 1. Only conclusion II follows.
 - ☒ 2. Both conclusion I and II follow.
 - ☒ 3. Neither conclusion I nor II follow.
 - ☒ 4. Only conclusion I follows.

Question ID : 63068047005

Status : Answered

Chosen Option : 4

Q.98 Select the option in which the numbers are NOT related in the same way as are the numbers in the given set.

(8, 40, 72)

- Ans
- ☒ 1. (6, 35, 54)
 - ☒ 2. (23, 115, 207)
 - ☒ 3. (21, 105, 189)
 - ☒ 4. (16, 80, 144)

Question ID : 63068021417

Status : Answered

Chosen Option : 1

Q.99 In the following question, select the related word from the given alternatives.

Voltmeter : voltage :: ammeter : ?

- Ans
- ☒ 1. Electric Current
 - ☒ 2. Amplitude
 - ☒ 3. Magnetic flux
 - ☒ 4. Resistance

Question ID : 63068044919

Status : Answered

Chosen Option : 1

Q.100 Select the option that is related to the third number in the same way as the second number is related to the first number.
27 : 65 :: 125 : ?

- Ans
- ☒ 1. 217
 - ☐ 2. 216
 - ☐ 3. 343
 - ☐ 4. 300

Question ID : 63068038155
Status : Answered
Chosen Option : 1

Q.101 Given below is a sentence that is jumbled. Select the option that shows the correct order of the fragments to form a meaningful sentence.

P. living in a big city

Q. a few years ago

R. we moved to London

S. and had to get used to

- Ans
- ☐ 1. QPSR
 - ☐ 2. PRSQ
 - ☐ 3. RPSQ
 - ☒ 4. RQSP

Question ID : 63068035027
Status : Answered
Chosen Option : 4

Q.102 Select the correctly spelt word from the following:

- Ans
- ☐ 1. Abcense
 - ☐ 2. Abscence
 - ☒ 3. Absence
 - ☐ 4. Abcence

Question ID : 63068035643
Status : Answered
Chosen Option : 3

Q.103 'ਧਰਤੀ ਸੂਰਜ ਦੁਆਲੇ ਘੁੰਮਦੀ ਹੈ।' ਵਾਕ ਦਾ ਸਹੀ ਅੰਗਰੇਜ਼ੀ ਅਨੁਵਾਦ ਹੈ:

- Ans
- ☐ 1. The earth is revolving around the Sun
 - ☐ 2. The earth revolves around the Son
 - ☐ 3. The earth revolve around the Sun
 - ☒ 4. The earth revolves around the Sun.

Question ID : 63068045513
Status : Answered
Chosen Option : 4

Q.104 The following sentence is divided into four parts. Identify the part that has an error in it.

The quality / of the apples / that he was selling / were not good.

- Ans
- ☒ 1. The quality
 - ☒ 2. that he was selling
 - ☒ 3. were not good
 - ☒ 4. of the apples

Question ID : 63068035145
Status : Answered
Chosen Option : 4

Q.105 Select the option that can best substitute the following set of words:
Common people or those belonging to low social class

- Ans
- ☒ 1. Villagers
 - ☒ 2. Plebeians
 - ☒ 3. Voters
 - ☒ 4. Citizens

Question ID : 63068036302
Status : Answered
Chosen Option : 2



Comprehension:

Handle the challenge of change well, and you can prosper greatly. Handle it poorly, and you put yourself and others at risk.

All too often people and organizations don't see the need for change. They don't correctly identify what to do, or successfully make it happen, or make it stick. Businesses don't. School systems don't. Nations don't.

We have studied the challenge of change for decades. We know the traps into which even very smart people fall. We know the steps that can assure group success. And we will show you what we have found.

Our method is showing, much more than telling, and showing with the method that has helped more people learn over the centuries than any other single technique : the fable.

Fables can be powerful because they take serious, confusing, and threatening subjects and make them clear and approachable. Fables can be memorable, unlike so much of the information that bombards us today and is forgotten tomorrow. They can stimulate thought, teach important lessons and motivate anyone-young or old—to use those lessons. In our modern, high tech world, we can easily forget this simple yet profound truth.

If you know much about the setting in which we have placed our story—Antarctica—You'll see that life for our penguins is not exactly as you would find it on a National Geographic documentary. Fables are like that. If you think a fun story with illustrations must be for young children, you'll soon see this book is about real life problems that frustrate nearly everyone in organizations.

The fable that follows was inspired by John Kotter's award winning research on how successful change really happens. All of us encounter the basic issues in the story. Few of us encounter highly effective ways of dealing well with those issues. And this is what our story is all about

SubQuestion No : 106**Q.106 The passage is about:**

- Ans
- ☒ 1. Future threat to glaciers in Antarctica
 - ☒ 2. Showcasing a documentary as part of a presentation.
 - ☒ 3. Life of Penguins during a meltdown
 - ☒ 4. The power of story telling to conveying a serious point.

Question ID : 63068035689

Status : Answered

Chosen Option : 4



Comprehension:

Handle the challenge of change well, and you can prosper greatly. Handle it poorly, and you put yourself and others at risk.

All too often people and organizations don't see the need for change. They don't correctly identify what to do, or successfully make it happen, or make it stick. Businesses don't. School systems don't. Nations don't.

We have studied the challenge of change for decades. We know the traps into which even very smart people fall. We know the steps that can assure group success. And we will show you what we have found.

Our method is showing, much more than telling, and showing with the method that has helped more people learn over the centuries than any other single technique : the fable.





Fables can be powerful because they take serious, confusing, and threatening subjects and make them clear and approachable. Fables can be memorable, unlike so much of the information that bombards us today and is forgotten tomorrow. They can stimulate thought, teach important lessons and motivate anyone-young or old—to use those lessons. In our modern, high tech world, we can easily forget this simple yet profound truth.

If you know much about the setting in which we have placed our story—Antarctica—You'll see that life for our penguins is not exactly as you would find it on a National Geographic documentary. Fables are like that. If you think a fun story with illustrations must be for young children, you'll soon see this book is about real life problems that frustrate nearly everyone in organizations.

The fable that follows was inspired by John Kotter's award winning research on how successful change really happens. All of us encounter the basic issues in the story. Few of us encounter highly effective ways of dealing well with those issues. And this is what our story is all about

SubQuestion No : 107

Q.107 The chief purpose of the author is to :

- Ans**  1. prepare organisations to handle problems and changes effectively
-  2. Identify reasons behind the collapse of any business.
-  3. stress on the importance of research in any organisation.
-  4. train managements to prepare a road map for future

Question ID : 63068035690

Status : Answered

Chosen Option : 1



Comprehension:

Handle the challenge of change well, and you can prosper greatly. Handle it poorly, and you put yourself and others at risk.

All too often people and organizations don't see the need for change. They don't correctly identify what to do, or successfully make it happen, or make it stick. Businesses don't. School systems don't. Nations don't.

We have studied the challenge of change for decades. We know the traps into which even very smart people fall. We know the steps that can assure group success. And we will show you what we have found.

Our method is showing, much more than telling, and showing with the method that has helped more people learn over the centuries than any other single technique : the fable.

Fables can be powerful because they take serious, confusing, and threatening subjects and make them clear and approachable. Fables can be memorable, unlike so much of the information that bombards us today and is forgotten tomorrow. They can stimulate thought, teach important lessons and motivate anyone-young or old—to use those lessons. In our modern, high tech world, we can easily forget this simple yet profound truth.

If you know much about the setting in which we have placed our story—Antarctica—You'll see that life for our penguins is not exactly as you would find it on a National Geographic documentary. Fables are like that. If you think a fun story with illustrations must be for young children, you'll soon see this book is about real life problems that frustrate nearly everyone in organizations.

The fable that follows was inspired by John Kotter's award winning research on how successful change really happens. All of us encounter the basic issues in the story. Few of us encounter highly effective ways of dealing well with those issues. And this is what our story is all about

SubQuestion No : 108

Q.108 The word 'profound' as used in the passage means:

- Ans
- ☒ 1. inevitable
 - ☒ 2. distinct
 - ☒ 3. insightful
 - ☒ 4. superficial

Question ID : 63068035691

Status : Answered

Chosen Option : 1



Comprehension:

Handle the challenge of change well, and you can prosper greatly. Handle it poorly, and you put yourself and others at risk.

All too often people and organizations don't see the need for change. They don't correctly identify what to do, or successfully make it happen, or make it stick. Businesses don't. School systems don't. Nations don't.

We have studied the challenge of change for decades. We know the traps into which even very smart people fall. We know the steps that can assure group success. And we will show you what we have found.

Our method is showing, much more than telling, and showing with the method that has helped more people learn over the centuries than any other single technique : the fable.





Fables can be powerful because they take serious, confusing, and threatening subjects and make them clear and approachable. Fables can be memorable, unlike so much of the information that bombards us today and is forgotten tomorrow. They can stimulate thought, teach important lessons and motivate anyone-young or old—to use those lessons. In our modern, high tech world, we can easily forget this simple yet profound truth.

If you know much about the setting in which we have placed our story—Antarctica—You'll see that life for our penguins is not exactly as you would find it on a National Geographic documentary. Fables are like that. If you think a fun story with illustrations must be for young children, you'll soon see this book is about real life problems that frustrate nearly everyone in organizations.

The fable that follows was inspired by John Kotter's award winning research on how successful change really happens. All of us encounter the basic issues in the story. Few of us encounter highly effective ways of dealing well with those issues. And this is what our story is all about

SubQuestion No : 109

Q.109 The author seems to be a:

- Ans**  **1. Corporate trainer**
-  **2. Documentary film producer**
-  **3. Natural Biologist**
-  **4. Seasoned story teller**

Question ID : **63068035692**

Status : **Answered**

Chosen Option : **1**



Comprehension:

Handle the challenge of change well, and you can prosper greatly. Handle it poorly, and you put yourself and others at risk.

All too often people and organizations don't see the need for change. They don't correctly identify what to do, or successfully make it happen, or make it stick. Businesses don't. School systems don't. Nations don't.

We have studied the challenge of change for decades. We know the traps into which even very smart people fall. We know the steps that can assure group success. And we will show you what we have found.

Our method is showing, much more than telling, and showing with the method that has helped more people learn over the centuries than any other single technique : the fable.

Fables can be powerful because they take serious, confusing, and threatening subjects and make them clear and approachable. Fables can be memorable, unlike so much of the information that bombards us today and is forgotten tomorrow. They can stimulate thought, teach important lessons and motivate anyone-young or old—to use those lessons. In our modern, high tech world, we can easily forget this simple yet profound truth.

If you know much about the setting in which we have placed our story—Antarctica—You'll see that life for our penguins is not exactly as you would find it on a National Geographic documentary. Fables are like that. If you think a fun story with illustrations must be for young children, you'll soon see this book is about real life problems that frustrate nearly everyone in organizations.

The fable that follows was inspired by John Kotter's award winning research on how successful change really happens. All of us encounter the basic issues in the story. Few of us encounter highly effective ways of dealing well with those issues. And this is what our story is all about

SubQuestion No : 110

Q.110 Kotter's key take away is that organisations should:

- Ans
- ☒ 1. Set up a separate budget to meet unforeseeable challenges.
 - ☒ 2. Have effective disaster control measures in place.
 - ☒ 3. Organise ongoing capacity building programs for staff.
 - ☒ 4. Anticipate changes and adapt quickly.

Question ID : 63068035693

Status : Answered

Chosen Option : 4

Q.111 'ਵਿਸ਼ਵਾਸ ਨੂੰ ਤੇੜਨ ਵਾਲਾ' ਲਈ ਇਕ ਸ਼ਬਦ ਚੁਣੋ।

- Ans
- ☒ 1. ਚੇਰ
 - ☒ 2. ਮੁਜਰਿਮ
 - ☒ 3. ਵਿਸ਼ਵਾਸ-ਘਾਤੀ
 - ☒ 4. ਮੁਲਜ਼ਿਮ

Question ID : 63068047545

Status : Answered

Chosen Option : 3

Q.112 'Punjab comes under North Railway' ਵਾਕ ਦਾ ਸਹੀ ਪੰਜਾਬੀ ਅਨੁਵਾਦ ਹੈ:-

- Ans
- ☐ 1. ਉੱਤਰ ਰੇਲਵੇ ਦਾ ਹਿੱਸਾ ਪੰਜਾਬ ਹੈ।
 - ☒ 2. ਪੰਜਾਬ, ਉੱਤਰ ਰੇਲਵੇ ਅਧੀਨ ਆਉਂਦਾ ਹੈ।
 - ☐ 3. ਪੰਜਾਬ, ਉੱਤਰ ਰੇਲਵੇ ਅਧੀਨ ਆਉਂਦੀ ਹੈ।
 - ☐ 4. ਉੱਤਰ ਰੇਲਵੇ ਵਿਚ ਪੰਜਾਬ ਸ਼ਾਮਲ ਹੈ।

Question ID : 63068047557
Status : Answered
Chosen Option : 2

Q.113 'ਮਾਯੂਸ' ਸ਼ਬਦ ਦਾ ਵਿਰੋਧੀ ਸ਼ਬਦ ਚੁਣੋ।

- Ans
- ☐ 1. ਦੁਖੀ
 - ☒ 2. ਖੁਸ਼ਮਿਜਾਜ਼
 - ☐ 3. ਨਿਰਾਸ਼
 - ☐ 4. ਨਾ-ਉਮੀਦ

Question ID : 63068047527
Status : Answered
Chosen Option : 2

Q.114 ਹੇਠ ਲਿਖਿਆਂ ਵਿੱਚੋਂ ਸੁੱਧ ਸ਼ਬਦ ਚੁਣੋ।

- Ans
- ☐ 1. ਢੁੱਪ
 - ☐ 2. ਤੁਪ
 - ☒ 3. ਧੁੱਪ
 - ☐ 4. ਧੂਪ

Question ID : 63068047513
Status : Answered
Chosen Option : 3

Q.115 ਸਾਫ਼-ਸਫ਼ਾਈ ਨਾਲ ਸੰਬੰਧਿਤ ਅਖਾਣ ਦੀ ਚੁਣੋ।

Ans

- ✓ 1. ਕੁੱਤਾ ਵੀ ਪੂਛ ਮਾਰ ਕੇ ਬਹਿੰਦਾ ਹੈ।
- ✗ 2. ਸਫ਼ਾਈ ਕਰ ਕੇ ਸੁੱਤੀ ਤੇ ਆਟਾ ਖਾ ਗਈ ਕੁੱਤੀ
- ✗ 3. ਕੰਧਾਂ ਦੇ ਵੀ ਕੰਨ ਹੁੰਦੇ ਨੇ
- ✗ 4. ਹਾਥੀ ਲੰਘ ਗਿਆ, ਬਸ ਪੂਛ ਰਹਿ ਗਈ

Question ID : 63068047534

Status : Answered

Chosen Option : 1

Comprehension:

ਹੇਠ ਲਿਖੇ ਪੈਰੇ ਨੂੰ ਧਿਆਨ ਨਾਲ ਪੜ੍ਹੋ ਤੇ ਹੇਠਾਂ ਲਿਖੇ ਪ੍ਰਸ਼ਨਾਂ ਦੇ ਉਤਰ ਦਿਉ।

ਪੰਜਾਬੀ ਕਵਿਤਾ ਵਾਂਗ ਪੰਜਾਬੀ ਵਾਰਤਕ ਦਾ ਇਤਿਹਾਸ ਬੜਾ ਪੁਰਾਣਾ ਹੈ। ਲਿਖਤੀ ਰੂਪ ਵਿਚ ਵਾਰਤਕ ਗੁਰੂ-ਕਾਲ ਵਿਚ ਹੀ ਲਿਖੀ ਜਾਣੀ ਸ਼ੁਰੂ ਹੋ ਗਈ ਸੀ। ਸੋਲ੍ਹਵੀਂ ਸਦੀ ਦੇ ਪਹਿਲੇ ਅੱਧ ਤੋਂ ਲੈ ਕੇ ਉੱਨੀਵੀਂ ਸਦੀ ਦੇ ਅੱਧ ਤੱਕ ਦੇ ਸਮੇਂ ਵਿਚ ਜਿਹੜੀ ਵਾਰਤਕ ਸਾਨੂੰ ਮਿਲਦੀ ਹੈ ਉਹ ਮੁੱਖ ਤੌਰ 'ਤੇ ਸਾਖੀਆਂ ਦੇ ਰੂਪ ਵਿਚ ਹੈ। ਅਜਿਹੀ ਪਹਿਲੀ ਵਾਰਤਕ ਰਚਨਾ 'ਪੁਰਾਤਨ ਜਨਮ ਸਾਖੀ' ਹੈ ਜੋ ਗੁਰੂ ਨਾਨਕ ਦੇਵ ਜੀ ਦੇ ਜੀਵਨ ਬਾਰੇ ਹੈ। ਇਸ ਪੁਸਤਕ ਵਿਚ ਸੰਸਕ੍ਰਿਤ ਤੇ ਫਾਰਸੀ ਦੀ ਪੁਰਾਤਨ ਵਾਰਤਕ ਵਾਂਗ ਕਹਾਣੀਆਂ, ਗੋਸ਼ਟਾਂ, ਵਿਆਖਿਆਵਾਂ ਤੇ ਕਲਪਿਤ ਦ੍ਰਿਸ਼ਾਂ ਦੇ ਵਰਨਣ ਦੇ ਸਭ ਰੰਗ ਮਿਲਦੇ ਹਨ। ਮੋਟੇ ਤੌਰ 'ਤੇ ਇਸ ਕਾਲ ਦੀ ਵਾਰਤਕ ਵਿਚ ਜਨਮ ਸਾਖੀਆਂ, ਬਚਨ, ਪਰਚੀਆਂ ਆਦਿ ਵਾਰਤਕ-ਰੂਪ ਮਿਲਦੇ ਹਨ। ਉੱਨੀਵੀਂ ਸਦੀ ਦੇ ਅੱਧ ਵਿਚ ਜਦੋਂ ਕਿ ਮਹਾਰਾਜ ਰਣਜੀਤ ਸਿੰਘ ਦਾ ਰਾਜ ਸੀ, ਗੁਰਬਾਣੀ ਦੇ ਕੁਝ ਭਾਗਾਂ ਦੇ ਟੀਕੇ ਵਾਰਤਕ ਵਿਚ ਕੀਤੇ ਗਏ ਤੇ ਫਾਰਸੀ ਤੇ ਅੰਗਰੇਜ਼ੀ ਵਿਚੋਂ ਕੁਝ ਰਚਨਾਵਾਂ ਦੇ ਅਨੁਵਾਦ ਵੀ ਪੰਜਾਬੀ ਵਾਰਤਕ ਵਿਚ ਕੀਤੇ ਗਏ। ਮਿਸਾਲ ਵਜੋਂ 'ਅੰਜੀਲ' ਦੇ ਇਕ ਭਾਗ ਦਾ ਅਨੁਵਾਦ 1815 ਵਿਚ ਹੋ ਚੁੱਕਾ ਸੀ ਤੇ ਇਸੇ ਤਰ੍ਹਾਂ 'ਅਦਲੇ ਅਕਬਰੀ' ਤੇ 'ਅਕਬਰਨਾਮਾ' ਆਦਿ ਫਾਰਸੀ ਪੁਸਤਕਾਂ ਦੇ ਕੁਝ ਭਾਗਾਂ ਦਾ ਅਨੁਵਾਦ ਵੀ ਇਸ ਸਮੇਂ ਹੋ ਗਿਆ ਸੀ।

SubQuestion No : 116

Q.116 ਉਪਰੋਕਤ ਪੈਰੇ ਦਾ ਢੁਕਵਾਂ ਸਿਰਲੇਖ ਹੈ।

Ans

- ✓ 1. ਪੰਜਾਬੀ ਵਾਰਤਕ ਦਾ ਜਨਮ
- ✗ 2. ਅਨੁਵਾਦ ਦਾ ਪਿਛੋਕੜ
- ✗ 3. ਅਨੁਵਾਦ ਦਾ ਇਤਿਹਾਸ
- ✗ 4. ਪੰਜਾਬੀ ਨਾਵਲ ਦਾ ਉਦੈ

Question ID : 63068047607

Status : Answered

Chosen Option : 1

Comprehension:

ਹੇਠ ਲਿਖੇ ਪੈਰੇ ਨੂੰ ਧਿਆਨ ਨਾਲ ਪੜ੍ਹੋ ਤੇ ਹੇਠਾਂ ਲਿਖੇ ਪ੍ਰਸ਼ਨਾਂ ਦੇ ਉਤਰ ਦਿਉ।

ਪੰਜਾਬੀ ਕਵਿਤਾ ਵਾਂਗ ਪੰਜਾਬੀ ਵਾਰਤਕ ਦਾ ਇਤਿਹਾਸ ਬੜਾ ਪੁਰਾਣਾ ਹੈ। ਲਿਖਤੀ ਰੂਪ ਵਿਚ ਵਾਰਤਕ ਗੁਰੂ-ਕਾਲ ਵਿਚ ਹੀ ਲਿਖੀ ਜਾਣੀ ਸ਼ੁਰੂ ਹੋ ਗਈ ਸੀ। ਸੋਲ੍ਹਵੀਂ ਸਦੀ ਦੇ ਪਹਿਲੇ ਅੱਧ ਤੋਂ ਲੈ ਕੇ ਉੱਨੀਵੀਂ ਸਦੀ ਦੇ ਅੱਧ ਤੱਕ ਦੇ ਸਮੇਂ ਵਿਚ ਜਿਹੜੀ ਵਾਰਤਕ ਸਾਨੂੰ ਮਿਲਦੀ ਹੈ ਉਹ ਮੁੱਖ ਤੌਰ 'ਤੇ ਸਾਖੀਆਂ ਦੇ ਰੂਪ ਵਿਚ ਹੈ। ਅਜਿਹੀ ਪਹਿਲੀ ਵਾਰਤਕ ਰਚਨਾ 'ਪੁਰਾਤਨ ਜਨਮ ਸਾਖੀ' ਹੈ ਜੋ ਗੁਰੂ ਨਾਨਕ ਦੇਵ ਜੀ ਦੇ ਜੀਵਨ ਬਾਰੇ ਹੈ। ਇਸ ਪੁਸਤਕ ਵਿਚ ਸੰਸਕ੍ਰਿਤ ਤੇ ਫਾਰਸੀ ਦੀ ਪੁਰਾਤਨ ਵਾਰਤਕ ਵਾਂਗ ਕਹਾਣੀਆਂ, ਗੋਸ਼ਟਾਂ, ਵਿਆਖਿਆਵਾਂ ਤੇ ਕਲਪਿਤ ਦ੍ਰਿਸ਼ਾਂ ਦੇ ਵਰਨਣ ਦੇ ਸਭ ਰੰਗ ਮਿਲਦੇ ਹਨ। ਮੋਟੇ ਤੌਰ 'ਤੇ ਇਸ ਕਾਲ ਦੀ ਵਾਰਤਕ ਵਿਚ ਜਨਮ ਸਾਖੀਆਂ, ਬਚਨ, ਪਰਚੀਆਂ ਆਦਿ ਵਾਰਤਕ-ਰੂਪ ਮਿਲਦੇ ਹਨ। ਉੱਨੀਵੀਂ ਸਦੀ ਦੇ ਅੱਧ ਵਿਚ ਜਦੋਂ ਕਿ ਮਹਾਰਾਜ ਰਣਜੀਤ ਸਿੰਘ ਦਾ ਰਾਜ ਸੀ, ਗੁਰਬਾਣੀ ਦੇ ਕੁਝ ਭਾਗਾਂ ਦੇ ਟੀਕੇ ਵਾਰਤਕ ਵਿਚ ਕੀਤੇ ਗਏ ਤੇ ਫਾਰਸੀ ਤੇ ਅੰਗਰੇਜ਼ੀ ਵਿਚੋਂ ਕੁਝ ਰਚਨਾਵਾਂ ਦੇ ਅਨੁਵਾਦ ਵੀ ਪੰਜਾਬੀ ਵਾਰਤਕ ਵਿਚ ਕੀਤੇ ਗਏ। ਮਿਸਾਲ ਵਜੋਂ 'ਅੰਜੀਲ' ਦੇ ਇਕ ਭਾਗ ਦਾ ਅਨੁਵਾਦ 1815 ਵਿਚ ਹੋ ਚੁੱਕਾ ਸੀ ਤੇ ਇਸੇ ਤਰ੍ਹਾਂ 'ਅਦਲੇ ਅਕਬਰੀ' ਤੇ 'ਅਕਬਰਨਾਮਾ' ਆਦਿ ਫਾਰਸੀ ਪੁਸਤਕਾਂ ਦੇ ਕੁਝ ਭਾਗਾਂ ਦਾ ਅਨੁਵਾਦ ਵੀ ਇਸ ਸਮੇਂ ਹੋ ਗਿਆ ਸੀ।

SubQuestion No : 117

Q.117 ਲਿਖਤੀ ਵਾਰਤਕ ਰੂਪ ਕਿਸ ਕਾਲ ਵਿਚ ਆਰੰਭ ਹੋਇਆ?

- Ans
- ☒ 1. 19ਵੀਂ ਸਦੀ ਦੇ ਪਹਿਲੇ ਅੱਧ ਤੋਂ
 - ☒ 2. 18ਵੀਂ ਸਦੀ ਦੇ ਦੂਜੇ ਅੱਧ ਤੋਂ
 - ☒ 3. ਗੁਰੂ ਕਾਲ
 - ☒ 4. 12 ਵੀਂ ਸਦੀ ਵਿਚ

Question ID : 63068047608

Status : Answered

Chosen Option : 3

Comprehension:

ਹੇਠ ਲਿਖੇ ਪੈਰੇ ਨੂੰ ਧਿਆਨ ਨਾਲ ਪੜ੍ਹੋ ਤੇ ਹੇਠਾਂ ਲਿਖੇ ਪ੍ਰਸ਼ਨਾਂ ਦੇ ਉਤਰ ਦਿਉ।

ਪੰਜਾਬੀ ਕਵਿਤਾ ਵਾਂਗ ਪੰਜਾਬੀ ਵਾਰਤਕ ਦਾ ਇਤਿਹਾਸ ਬੜਾ ਪੁਰਾਣਾ ਹੈ। ਲਿਖਤੀ ਰੂਪ ਵਿਚ ਵਾਰਤਕ ਗੁਰੂ-ਕਾਲ ਵਿਚ ਹੀ ਲਿਖੀ ਜਾਣੀ ਸ਼ੁਰੂ ਹੋ ਗਈ ਸੀ। ਸੋਲ੍ਹਵੀਂ ਸਦੀ ਦੇ ਪਹਿਲੇ ਅੱਧ ਤੋਂ ਲੈ ਕੇ ਉੱਨੀਵੀਂ ਸਦੀ ਦੇ ਅੱਧ ਤੱਕ ਦੇ ਸਮੇਂ ਵਿਚ ਜਿਹੜੀ ਵਾਰਤਕ ਸਾਨੂੰ ਮਿਲਦੀ ਹੈ ਉਹ ਮੁੱਖ ਤੌਰ 'ਤੇ ਸਾਖੀਆਂ ਦੇ ਰੂਪ ਵਿਚ ਹੈ। ਅਜਿਹੀ ਪਹਿਲੀ ਵਾਰਤਕ ਰਚਨਾ 'ਪੁਰਾਤਨ ਜਨਮ ਸਾਖੀ' ਹੈ ਜੋ ਗੁਰੂ ਨਾਨਕ ਦੇਵ ਜੀ ਦੇ ਜੀਵਨ ਬਾਰੇ ਹੈ। ਇਸ ਪੁਸਤਕ ਵਿਚ ਸੰਸਕ੍ਰਿਤ ਤੇ ਫਾਰਸੀ ਦੀ ਪੁਰਾਤਨ ਵਾਰਤਕ ਵਾਂਗ ਕਹਾਣੀਆਂ, ਗੋਸ਼ਟਾਂ, ਵਿਆਖਿਆਵਾਂ ਤੇ ਕਲਪਿਤ ਦ੍ਰਿਸ਼ਾਂ ਦੇ ਵਰਨਣ ਦੇ ਸਭ ਰੰਗ ਮਿਲਦੇ ਹਨ। ਮੋਟੇ ਤੌਰ 'ਤੇ ਇਸ ਕਾਲ ਦੀ ਵਾਰਤਕ ਵਿਚ ਜਨਮ ਸਾਖੀਆਂ, ਬਚਨ, ਪਰਚੀਆਂ ਆਦਿ ਵਾਰਤਕ-ਰੂਪ ਮਿਲਦੇ ਹਨ। ਉੱਨੀਵੀਂ ਸਦੀ ਦੇ ਅੱਧ ਵਿਚ ਜਦੋਂ ਕਿ ਮਹਾਰਾਜ ਰਣਜੀਤ ਸਿੰਘ ਦਾ ਰਾਜ ਸੀ, ਗੁਰਬਾਣੀ ਦੇ ਕੁਝ ਭਾਗਾਂ ਦੇ ਟੀਕੇ ਵਾਰਤਕ ਵਿਚ ਕੀਤੇ ਗਏ ਤੇ ਫਾਰਸੀ ਤੇ ਅੰਗਰੇਜ਼ੀ ਵਿਚੋਂ ਕੁਝ ਰਚਨਾਵਾਂ ਦੇ ਅਨੁਵਾਦ ਵੀ ਪੰਜਾਬੀ ਵਾਰਤਕ ਵਿਚ ਕੀਤੇ ਗਏ। ਮਿਸਾਲ ਵਜੋਂ 'ਅੰਜੀਲ' ਦੇ ਇਕ ਭਾਗ ਦਾ ਅਨੁਵਾਦ 1815 ਵਿਚ ਹੋ ਚੁੱਕਾ ਸੀ ਤੇ ਇਸੇ ਤਰ੍ਹਾਂ 'ਅਦਲੇ ਅਕਬਰੀ' ਤੇ 'ਅਕਬਰਨਾਮਾ' ਆਦਿ ਫਾਰਸੀ ਪੁਸਤਕਾਂ ਦੇ ਕੁਝ ਭਾਗਾਂ ਦਾ ਅਨੁਵਾਦ ਵੀ ਇਸ ਸਮੇਂ ਹੋ ਗਿਆ ਸੀ।

SubQuestion No : 118

Q.118 ਪੰਜਾਬੀ ਦੀ ਪਹਿਲੀ ਵਾਰਤਕ ਰਚਨਾ ਕਿਹੜੀ ਹੈ?

Ans

- ☒ 1. ਅੰਜੀਲ
- ☒ 2. ਅਕਬਰਨਾਮਾ
- ☒ 3. ਪੁਰਾਤਨ ਜਨਮ ਸਾਖੀ
- ☒ 4. ਅਦਲੇ ਅਕਬਰੀ

Question ID : 63068047609

Status : Answered

Chosen Option : 3

Comprehension:

ਹੇਠ ਲਿਖੇ ਪੈਰੇ ਨੂੰ ਧਿਆਨ ਨਾਲ ਪੜ੍ਹੋ ਤੇ ਹੇਠਾਂ ਲਿਖੇ ਪ੍ਰਸ਼ਨਾਂ ਦੇ ਉਤਰ ਦਿਉ।

ਪੰਜਾਬੀ ਕਵਿਤਾ ਵਾਂਗ ਪੰਜਾਬੀ ਵਾਰਤਕ ਦਾ ਇਤਿਹਾਸ ਬੜਾ ਪੁਰਾਣਾ ਹੈ। ਲਿਖਤੀ ਰੂਪ ਵਿਚ ਵਾਰਤਕ ਗੁਰੂ-ਕਾਲ ਵਿਚ ਹੀ ਲਿਖੀ ਜਾਣੀ ਸ਼ੁਰੂ ਹੋ ਗਈ ਸੀ। ਸੋਲ੍ਹਵੀਂ ਸਦੀ ਦੇ ਪਹਿਲੇ ਅੱਧ ਤੋਂ ਲੈ ਕੇ ਉੱਨੀਵੀਂ ਸਦੀ ਦੇ ਅੱਧ ਤੱਕ ਦੇ ਸਮੇਂ ਵਿਚ ਜਿਹੜੀ ਵਾਰਤਕ ਸਾਨੂੰ ਮਿਲਦੀ ਹੈ ਉਹ ਮੁੱਖ ਤੌਰ 'ਤੇ ਸਾਖੀਆਂ ਦੇ ਰੂਪ ਵਿਚ ਹੈ। ਅਜਿਹੀ ਪਹਿਲੀ ਵਾਰਤਕ ਰਚਨਾ 'ਪੁਰਾਤਨ ਜਨਮ ਸਾਖੀ' ਹੈ ਜੋ ਗੁਰੂ ਨਾਨਕ ਦੇਵ ਜੀ ਦੇ ਜੀਵਨ ਬਾਰੇ ਹੈ। ਇਸ ਪੁਸਤਕ ਵਿਚ ਸੰਸਕ੍ਰਿਤ ਤੇ ਫਾਰਸੀ ਦੀ ਪੁਰਾਤਨ ਵਾਰਤਕ ਵਾਂਗ ਕਹਾਣੀਆਂ, ਗੋਸ਼ਟਾਂ, ਵਿਆਖਿਆਵਾਂ ਤੇ ਕਲਪਿਤ ਦ੍ਰਿਸ਼ਾਂ ਦੇ ਵਰਨਣ ਦੇ ਸਭ ਰੰਗ ਮਿਲਦੇ ਹਨ। ਮੋਟੇ ਤੌਰ 'ਤੇ ਇਸ ਕਾਲ ਦੀ ਵਾਰਤਕ ਵਿਚ ਜਨਮ ਸਾਖੀਆਂ, ਬਚਨ, ਪਰਚੀਆਂ ਆਦਿ ਵਾਰਤਕ-ਰੂਪ ਮਿਲਦੇ ਹਨ। ਉੱਨੀਵੀਂ ਸਦੀ ਦੇ ਅੱਧ ਵਿਚ ਜਦੋਂ ਕਿ ਮਹਾਰਾਜ ਰਣਜੀਤ ਸਿੰਘ ਦਾ ਰਾਜ ਸੀ, ਗੁਰਬਾਣੀ ਦੇ ਕੁਝ ਭਾਗਾਂ ਦੇ ਟੀਕੇ ਵਾਰਤਕ ਵਿਚ ਕੀਤੇ ਗਏ ਤੇ ਫਾਰਸੀ ਤੇ ਅੰਗਰੇਜ਼ੀ ਵਿਚੋਂ ਕੁਝ ਰਚਨਾਵਾਂ ਦੇ ਅਨੁਵਾਦ ਵੀ ਪੰਜਾਬੀ ਵਾਰਤਕ ਵਿਚ ਕੀਤੇ ਗਏ। ਮਿਸਾਲ ਵਜੋਂ 'ਅੰਜੀਲ' ਦੇ ਇਕ ਭਾਗ ਦਾ ਅਨੁਵਾਦ 1815 ਵਿਚ ਹੋ ਚੁੱਕਾ ਸੀ ਤੇ ਇਸੇ ਤਰ੍ਹਾਂ 'ਅਦਲੇ ਅਕਬਰੀ' ਤੇ 'ਅਕਬਰਨਾਮਾ' ਆਦਿ ਫਾਰਸੀ ਪੁਸਤਕਾਂ ਦੇ ਕੁਝ ਭਾਗਾਂ ਦਾ ਅਨੁਵਾਦ ਵੀ ਇਸ ਸਮੇਂ ਹੋ ਗਿਆ ਸੀ।

SubQuestion No : 119

Q.119 ਪੁਰਾਤਨ ਵਾਰਤਕ ਵਿਚ ਸਾਨੂੰ ਕਿਹੜੇ ਵਾਰਤਕ ਰੂਪ ਪ੍ਰਾਪਤ ਹੁੰਦੇ ਹਨ?

Ans

- ✓ 1. ਸਾਖੀਆਂ, ਬਚਨ, ਪਰਚੀਆਂ
- ✗ 2. ਪਰਚੀਆਂ, ਕਾਫੀਆਂ, ਟੀਕੇ
- ✗ 3. ਬਚਨ, ਸੀਹਰਫੀ, ਦੇਹਰੇ
- ✗ 4. ਸਾਖੀਆਂ, ਟੀਕੇ, ਸਲੋਕ

Question ID : 63068047610

Status : Answered

Chosen Option : 1

Comprehension:

ਹੇਠ ਲਿਖੇ ਪੈਰੇ ਨੂੰ ਧਿਆਨ ਨਾਲ ਪੜ੍ਹੋ ਤੇ ਹੇਠਾਂ ਲਿਖੇ ਪ੍ਰਸ਼ਨਾਂ ਦੇ ਉਤਰ ਦਿਉ।

ਪੰਜਾਬੀ ਕਵਿਤਾ ਵਾਂਗ ਪੰਜਾਬੀ ਵਾਰਤਕ ਦਾ ਇਤਿਹਾਸ ਬੜਾ ਪੁਰਾਣਾ ਹੈ। ਲਿਖਤੀ ਰੂਪ ਵਿਚ ਵਾਰਤਕ ਗੁਰੂ-ਕਾਲ ਵਿਚ ਹੀ ਲਿਖੀ ਜਾਣੀ ਸ਼ੁਰੂ ਹੋ ਗਈ ਸੀ। ਸੋਲ੍ਹਵੀਂ ਸਦੀ ਦੇ ਪਹਿਲੇ ਅੱਧ ਤੋਂ ਲੈ ਕੇ ਉੱਨੀਵੀਂ ਸਦੀ ਦੇ ਅੱਧ ਤੱਕ ਦੇ ਸਮੇਂ ਵਿਚ ਜਿਹੜੀ ਵਾਰਤਕ ਸਾਨੂੰ ਮਿਲਦੀ ਹੈ ਉਹ ਮੁੱਖ ਤੌਰ 'ਤੇ ਸਾਖੀਆਂ ਦੇ ਰੂਪ ਵਿਚ ਹੈ। ਅਜਿਹੀ ਪਹਿਲੀ ਵਾਰਤਕ ਰਚਨਾ 'ਪੁਰਾਤਨ ਜਨਮ ਸਾਖੀ' ਹੈ ਜੋ ਗੁਰੂ ਨਾਨਕ ਦੇਵ ਜੀ ਦੇ ਜੀਵਨ ਬਾਰੇ ਹੈ। ਇਸ ਪੁਸਤਕ ਵਿਚ ਸੰਸਕ੍ਰਿਤ ਤੇ ਫਾਰਸੀ ਦੀ ਪੁਰਾਤਨ ਵਾਰਤਕ ਵਾਂਗ ਕਹਾਣੀਆਂ, ਗੋਸ਼ਟਾਂ, ਵਿਆਖਿਆਵਾਂ ਤੇ ਕਲਪਿਤ ਦ੍ਰਿਸ਼ਾਂ ਦੇ ਵਰਨਣ ਦੇ ਸਭ ਰੰਗ ਮਿਲਦੇ ਹਨ। ਮੋਟੇ ਤੌਰ 'ਤੇ ਇਸ ਕਾਲ ਦੀ ਵਾਰਤਕ ਵਿਚ ਜਨਮ ਸਾਖੀਆਂ, ਬਚਨ, ਪਰਚੀਆਂ ਆਦਿ ਵਾਰਤਕ-ਰੂਪ ਮਿਲਦੇ ਹਨ। ਉੱਨੀਵੀਂ ਸਦੀ ਦੇ ਅੱਧ ਵਿਚ ਜਦੋਂ ਕਿ ਮਹਾਰਾਜ ਰਣਜੀਤ ਸਿੰਘ ਦਾ ਰਾਜ ਸੀ, ਗੁਰਬਾਣੀ ਦੇ ਕੁਝ ਭਾਗਾਂ ਦੇ ਟੀਕੇ ਵਾਰਤਕ ਵਿਚ ਕੀਤੇ ਗਏ ਤੇ ਫਾਰਸੀ ਤੇ ਅੰਗਰੇਜ਼ੀ ਵਿਚੋਂ ਕੁਝ ਰਚਨਾਵਾਂ ਦੇ ਅਨੁਵਾਦ ਵੀ ਪੰਜਾਬੀ ਵਾਰਤਕ ਵਿਚ ਕੀਤੇ ਗਏ। ਮਿਸਾਲ ਵਜੋਂ 'ਅੰਜੀਲ' ਦੇ ਇਕ ਭਾਗ ਦਾ ਅਨੁਵਾਦ 1815 ਵਿਚ ਹੋ ਚੁੱਕਾ ਸੀ ਤੇ ਇਸੇ ਤਰ੍ਹਾਂ 'ਅਦਲੇ ਅਕਬਰੀ' ਤੇ 'ਅਕਬਰਨਾਮਾ' ਆਦਿ ਫਾਰਸੀ ਪੁਸਤਕਾਂ ਦੇ ਕੁਝ ਭਾਗਾਂ ਦਾ ਅਨੁਵਾਦ ਵੀ ਇਸ ਸਮੇਂ ਹੋ ਗਿਆ ਸੀ।

SubQuestion No : 120

Q.120 ਮਹਾਰਾਜਾ ਰਣਜੀਤ ਸਿੰਘ ਦੇ ਰਾਜ ਸਮੇਂ ਕਿਹੜੀਆਂ ਦੋ ਭਾਸ਼ਾਵਾਂ ਵਿਚੋਂ ਅਨੁਵਾਦ ਹੋਏ?

- Ans
- ☒ 1. ਫਾਰਸੀ ਤੇ ਅੰਗਰੇਜ਼ੀ
 - ☒ 2. ਉਰਦੂ ਤੇ ਅੰਗਰੇਜ਼ੀ
 - ☒ 3. ਅੰਗਰੇਜ਼ੀ ਤੇ ਫਰੈਂਚ
 - ☒ 4. ਫਾਰਸੀ ਤੇ ਅਰਬੀ

Question ID : 63068047611

Status : Answered

Chosen Option : 1

Q.121 Which of the following is/are interactive tools of Web 2.0?

- I. Online Chat
- II. Google Doc

- Ans
- ☒ 1. Neither I nor II
 - ☒ 2. Only I
 - ☒ 3. Both I and II
 - ☒ 4. Only II

Question ID : 63068047298

Status : Answered

Chosen Option : 3

Q.122 In which year Email was started?

- Ans
- ☐ 1. 1935
 - ☒ 2. 1965
 - ☐ 3. 1995
 - ☐ 4. 1973

Question ID : 63068047366
Status : Answered
Chosen Option : 4

Q.123 Storage capacity of magnetic tape is given by:

- Ans
- ☐ 1. Data recording density + Length
 - ☐ 2. Data recording density ÷ Length
 - ☐ 3. Data recording density – Length
 - ☒ 4. Data recording density × Length

Question ID : 63068047190
Status : Answered
Chosen Option : 4

Q.124 Which of the following statement/s is /are correct?

- I. Instant Messaging is a form of real time communication between two or more people based on typed text or using audio or video.
II. The message is conveyed via devices connected over a network.

- Ans
- ☐ 1. Only II
 - ☐ 2. Only I
 - ☐ 3. Neither I nor II
 - ☒ 4. Both I and II

Question ID : 63068047415
Status : Answered
Chosen Option : 4

Q.125 In the area of operating, some new concepts gained popularity during fifth generation.
Which of the following are those concepts?

- I. Microkernels
II. Multithreading

- Ans
- ☐ 1. Only I
 - ☐ 2. Neither I nor II
 - ☒ 3. Both I and II
 - ☐ 4. Only II

Question ID : 63068047132
Status : Answered
Chosen Option : 4

Q.126 ਹੇਠਾਂ ਦਿੱਤਿਆਂ ਵਿੱਚੋਂ ਕਿਹੜੀ ਟ੍ਰਾਂਕੇਸ਼ਨ ਸਰਚ ਦੀ ਕਿਸਮ ਹੈ?

I. ਖੱਬਾ (Left)

II. ਸੱਜਾ (Right)

- Ans
- ☐ 1. ਨਾ ਤਾਂ । ਨਾ ਹੀ ॥
 - ☐ 2. ਸਿਰਫ਼ ।
 - ☒ 3. । ਅਤੇ ॥ ਦੋਵੇਂ
 - ☐ 4. ਸਿਰਫ਼ ॥

Question ID : 63068047331
Status : Answered
Chosen Option : 2

Q.127 Which of the following is an output device?

- Ans
- ☐ 1. OCR
 - ☐ 2. Camera
 - ☐ 3. Microphone
 - ☒ 4. Projector

Question ID : 63068047165
Status : Answered
Chosen Option : 4

Q.128 What is the full form of FDM in 3D Printing technology?

- Ans
- ☐ 1. Fixed Display Mechanision
 - ☐ 2. Frequency Differential Modulation
 - ☒ 3. Fused Deposition Modeling
 - ☐ 4. Fusion Description Method

Question ID : 63068047181
Status : Answered
Chosen Option : 2

Q.129 UNIVAC LARC belongs to which generation of computers?

- Ans
- ☐ 1. Fourth
 - ☒ 2. Second
 - ☐ 3. First
 - ☐ 4. Third

Question ID : 63068047126
Status : Answered
Chosen Option : 3

Q.130 In MS Word 2019, which shortcut key is used to paste the already cut/copy item?

- Ans
- ☐ 1. Ctrl + P
 - ☐ 2. Ctrl + S
 - ☐ 3. Ctrl + K
 - ☒ 4. Ctrl + V

Question ID : 63068047207
Status : Answered
Chosen Option : 4

Q.131 In MS PowerPoint 2019, which of the following is a/are valid file extension/s?

- I. .pomt
- II. .ppsm

- Ans
- ☒ 1. Only II
 - ☐ 2. Neither I nor II
 - ☐ 3. Both I and II
 - ☐ 4. Only I

Question ID : 63068047248
Status : Answered
Chosen Option : 1

Q.132 _____ transforms information from binary form to human acceptable form.

- Ans
- ☒ 1. Output interface
 - ☐ 2. Processing interface
 - ☐ 3. Memory interface
 - ☐ 4. Control interface

Question ID : 63068045380
Status : Answered
Chosen Option : 1

Q.133 What is the full form of XML?

- Ans
- ☒ 1. Extensible Markup Language
 - ☐ 2. Extensible Makeup Language
 - ☐ 3. Extensible Marking Language
 - ☐ 4. Extensible Mobile Language

Question ID : 63068047296
Status : Answered
Chosen Option : 1

Q.134 Which of the following is a/are type/s of e-mail service?

- I. POP mail
- II. Web-based
- III. Mail forwarding

Ans ☒ 1. II and III
☒ 2. I and II
☒ 3. I, II and III
☒ 4. I and III

Question ID : 63068047303

Status : Answered

Chosen Option : 3

Q.135 DCMI is the most commonly used metadata schema. There are ____ elements in DCMI.

Ans ☒ 1. 15
☒ 2. 18
☒ 3. 12
☒ 4. 10

Question ID : 63068047333

Status : Answered

Chosen Option : 1

Q.136 Bar codes on goods, books etc. are used for ____.

Ans ☒ 1. Unique identification
☒ 2. Object identification
☒ 3. MRP
☒ 4. Object recognition

Question ID : 63068047148

Status : Answered

Chosen Option : 1

Q.137 Which of the following is a/are desirable quality/qualities of operating system?

- I. Changeable over time
- II. Low maintenance cost

Ans ☒ 1. Both I and II
☒ 2. Only I
☒ 3. Neither I nor II
☒ 4. Only II

Question ID : 63068047270

Status : Answered

Chosen Option : 1

Q.138 Which of the following is a/are components of search engine?

- I. Robot or spider
- II. Database
- III. Search Interface

Ans ☒ 1. I, II and III

☐ 2. I and II

☐ 3. I and III

☐ 4. II and III

Question ID : 63068047322

Status : Answered

Chosen Option : 1

Q.139 Which of the following is the screen lock available in a mobile phone?

- I. Pattern Lock
- II. Face Unlock

Ans ☒ 1. Both I and II

☐ 2. Neither I nor II

☐ 3. Only I

☐ 4. Only II

Question ID : 63068047377

Status : Answered

Chosen Option : 1

Q.140 Which of the following is a/are type/s of operating system structure?

- I. Layered structure approach
- II. Kernel approach
- III. Virtual Machine

Ans ☐ 1. I and III

☐ 2. I and II

☒ 3. I, II and III

☐ 4. II and III

Question ID : 63068047276

Status : Answered

Chosen Option : 3

Q.141 Consider the following directory entry as shown in figure.

File Name	Type and size	Location info	Protection info	Open count	Lock	Flags	Misc info

Which statement is true about open count?

- I. It indicates the number processes which open file concurrently.
- II. It indicates the number of files open by a process.

Ans ☐ 1. Both I and II

☐ 2. Neither I nor II

☒ 3. Only I

☐ 4. Only II

Question ID : 63068047278

Status : Answered

Chosen Option : 4

Q.142 In MS Excel 2019, which shortcut key is used to get the open options?

- Ans ☒ 1. Ctrl + O
☒ 2. Alt + O
☒ 3. Shift + P
☒ 4. Ctrl + P

Question ID : 63068047226
Status : Answered
Chosen Option : 2

Q.143 In MS PowerPoint 2019, which of the following pair/s of function – tabs is/are correct?

- I. Presentation Views – Home
II. Paragraph – Design

- Ans ☒ 1. Only I
☒ 2. Only II
☒ 3. Both I and II
☒ 4. Neither I nor II

Question ID : 63068047257
Status : Answered
Chosen Option : 3

Q.144 How many digits are there in a mobile number in India?

- Ans ☒ 1. 10
☒ 2. 14
☒ 3. 15
☒ 4. 13

Question ID : 63068047385
Status : Answered
Chosen Option : 1

Q.145 Which of the following statement/s is/ are not correct about Firmwares?

- I. Firmwares are responsible for basic operations of the hardware of smartphones
II. Firmwares are those programmes that are closely related to the particular device

- Ans ☒ 1. Neither I nor II
☒ 2. Both I and II
☒ 3. Only I
☒ 4. Only II

Question ID : 63068047390
Status : Answered
Chosen Option : 2

Q.146 In MS Word 2019, which shortcut key is used to double space the lines?

- Ans
- ☒ 1. Ctrl + 1
 - ☒ 2. Shift + 1
 - ☒ 3. Ctrl + 2
 - ☒ 4. Shift + 2

Question ID : 63068047218
Status : Answered
Chosen Option : 3

Q.147 Which of the following is not a valid search result while searching 'st*e' on a search engine?

- Ans
- ☒ 1. Stone
 - ☒ 2. Store
 - ☒ 3. Style
 - ☒ 4. Stem

Question ID : 63068047319
Status : Answered
Chosen Option : 4

Q.148 Which of the following is a third generation computer?

- Ans
- ☒ 1. ENIAC
 - ☒ 2. UNIVAC I
 - ☒ 3. CDC 600
 - ☒ 4. Honeywell 400

Question ID : 63068047122
Status : Answered
Chosen Option : 2

Q.149 Print area icon is found in which tab of MS Excel 2019?

- Ans
- ☒ 1. Insert
 - ☒ 2. Page Layout
 - ☒ 3. Data
 - ☒ 4. Review

Question ID : 63068047235
Status : Answered
Chosen Option : 2

Q.150 Which one of the following is NOT an input device?

- Ans
- ☒ 1. Projector
 - ☒ 2. Keyboard devices
 - ☒ 3. Digitizer
 - ☒ 4. Point and draw device

Question ID : 63068047157
Status : Answered
Chosen Option : 1



Teachingninja.in