



# Teachingninja.in



**Latest Govt Job updates**



**Private Job updates**



**Free Mock tests available**



**Visit - [teachingninja.in](https://teachingninja.in)**

# **UP Police Constable**

**Previous Year Paper**  
**19 June 2018 Shift 2**



## 150 Questions

---

**Que. 1** \_\_\_\_\_ is NOT appointed by the President of India?

1. A judge of a High court
2. The Advocate - General
3. The Governor
4. The Attorney - General

Correct Option - 2

---

**Que. 2** Name the first Indian state where every household has at least one member having a bank account.

1. Mahashtra
2. Haryana
3. Himachal Pradesh
4. Kerala

Correct Option - 4

---

**Que. 3** Select the duct which takes the urine out from the urinary bladder to the outside of the body.

1. Urethra
2. Ureter
3. Bladder
4. Renal pelvis

Correct Option - 1

---

**Que. 4** National Education Day is celebrated on \_\_\_\_\_ every year.

1. 27<sup>th</sup> October
2. 4<sup>th</sup> March
3. 17<sup>th</sup> September
4. 11<sup>th</sup> November

Correct Option - 4

---

**Que. 5** The GST Act was enacted by Parliament vide the \_\_\_\_\_ Constitution Amendment Act, 2016 on 8th September 2016.

1. 97th
2. 84th
3. 101st
4. 114th

Correct Option - 3

---

**Que. 6** Which of the following districts belongs to the Bundelkhand region of Uttar Pradesh?

1. Fatehpur
2. Sonbhadra.
3. Mahoba
4. Shravasti

Correct Option - 3

---

**Que. 7** The area of Uttar Pradesh is approximately \_\_\_\_\_ of the total area of the country.

1. 13.5%
2. 9.4%
3. 8.4%
4. 7.3%

Correct Option - 4

---

**Que. 8** In the 6th century BCE Mathura became the capital of the \_\_\_\_\_.

1. Panchal
2. Ang
3. Surasena
4. Matsya

Correct Option - 3

---

**Que. 9** Which romantic - poetry writer was known for his work entitled 'Madnastak'?

1. Rahim
2. Malik Mohmmad Jaisi
3. Zia - ud - din Barni
4. Sultan Firoz Tighlac

Correct Option - 1

---

**Que. 10** Who was the editor of Uttar Pradesh daily newspaper "Hindustan" 1887?

1. Mahabir Prasad Dwivedi
2. Padumlal Punnalal Bakshi
3. Madan Mohan Malviya
4. Bhartendu Harish Chandra

Correct Option - 3

---

**Que. 11** In which year was it made legally binding to use Hindi in all official works in Uttar Pradesh?

1. 1947
2. 1951
3. 1968
4. 1977

Correct Option - 2

---

**Que. 12** Which of the following was a major painter at Akbar's court?

1. Mir Musavvir
2. Dost Muhammad
3. Daswanth
4. Mir Syiad Ali

Correct Option - 3

---

**Que. 13** \_\_\_\_\_ was a prominent musicians of Faizabad who developed the Tappa style in classical music.

1. Mustari Bai
2. Khushi Mahraj
3. Mehndi Khan
4. Mian Gulam Nabi Shori

Correct Option - 4

---

**Que. 14** Which of the following is a popular folk song of Bundelkhand?

1. Birha
2. Alha
3. Rasiya
4. Languria

Correct Option - 2

---

**Que. 15** Which of the following rivers joins the Karnali river at Brahmaghat in India and form the Ghaghara river?

1. Rapti
2. Gandak
3. Sharda
4. Sarayu

Correct Option - 3

---

**Que. 16** Which of the following minerals is also known as "Yellow Cake"?

1. Plutonium
2. Uranium
3. Thorium
4. Aluminum

Correct Option - 2

---

**Que. 17** Which of the following celebrities received India's second highest civilian award in 2018?

1. Ghulam Mustafa Khan
2. Sharda Sinha
3. MS Dhoni
4. Pankaj Advani

Correct Option - 1

---

**Que. 18** Who was recently appointed as the first Director-General of the National Testing Agency (NTA)?

1. Rajesh Kumar Chaturvedi
2. Joseph Emmanuel
3. Anita Karwal
4. Vineet Joshi

Correct Option - 4

---

**Que. 19** The G20 Summit will be held at \_\_\_\_\_ in 2018.

1. Rio de Janeiro

2. Buenos Aires
3. Mexico City
4. Istanbul

Correct Option - 2

---

**Que. 20** In 1825, who founded the Vedanta College in which courses both in Indian learning and in Western social and physical sciences were offered?

1. Aurobindo Ghosh
2. Ram Mohan Roy
3. Iswarchandra Vidyasagar
4. Swami Vivekanand

Correct Option - 2

---

**Que. 21** Which of the following country was known as Ceylon in Past?

1. Maldives
2. Sri Lanka
3. Mauritius
4. Suriname

Correct Option - 2

---

**Que. 22** India's distance from Europe 7,000 km has been reduced by the opening of \_\_\_\_\_ canal in 1869.

1. Panama
2. Kiel
3. Suez
4. Volga - Don

Correct Option - 3

---

**Que. 23** Who was one of the chief guests of the 2018 Republic Day parade?

1. Bidhya Devi Bhandari
2. Maithripala Sirisena
3. Sheikh Hasina
4. Aung San Suu Kyi

Correct Option - 4

---

**Que. 24** Which of the following e-commerce companies has signed a pact with Government of Uttar Pradesh for the sale of Khadi Products?

1. Flipkart
2. Snapdeal
3. Amazon India
4. Paytm

Correct Option - 3

---

**Que. 25** Which of the following was a scientist as well as a great industrialist who founded many industries in India?

1. CV Raman
2. JC Bose

3. Vikram Sarabhai
4. Homi Jehangir Bhabha

Correct Option - 3

---

**Que. 26** Who is the author of the book "A better India: A Better World"?

1. Kiran Bedi
2. NR Narayana Murthy
3. Sudha Maurthy
4. Shashi Tharoor

Correct Option - 2

---

**Que. 27** Who among the following players, was NOT involved in the ball - tampering issue of the recent South Africa - Australia Test Series in 2018?

1. David Warner
2. Steve Smith
3. Tim Paine
4. Cameron Bancroft

Correct Option - 3

---

**Que. 28** The boiling point of water in Fahrenheit is \_\_\_\_\_.

1. 100°F
2. 212°F
3. 150°F
4. 244°F

Correct Option - 2

---

**Que. 29** Which of these is NOT a plantation crop?

1. Coffee
2. Tea
3. Cashew
4. Millets

Correct Option - 4

---

**Que. 30** By which other name is the pulse 'tur' also known as?

1. Arhar
2. Jowar
3. Masoor
4. Ragi

Correct Option - 1

---

**Que. 31** A/an \_\_\_\_\_ is used to measure the force and velocity of wind.

1. speedometer
2. lactometer
3. thermometer
4. anemometer

Correct Option - 4

---

**Que. 32** When is National Hindi Day observed in India?

1. 14<sup>th</sup> September
2. 14<sup>th</sup> November
3. 14<sup>th</sup> December
4. 14<sup>th</sup> June

Correct Option - 1

---

**Que. 33** Article 6 of the Universal Declaration of Human Rights deals with the \_\_\_\_\_.

1. Right to Recognition as a Person before the Law
2. Right to Remedy by Competent Tribunal
3. Freedom from Arbitrary Arrest and Exile
4. Right to Equality before the

Correct Option - 1

---

**Que. 34** Where are the headquarters of the National Stock Exchange situated?

1. Chennai
2. Delhi
3. Mumbai
4. Bangalore

Correct Option - 3

---

**Que. 35** The Union Government of India has decided to declare 2018 as National Year of \_\_\_\_\_.

1. Fruits
2. Pulses
3. Potatoes
4. Millets

Correct Option - 4

---

**Que. 36** The \_\_\_\_\_ is a colourful and mesmeric fair which is held a few days after Holi, every year in Meerut in Uttar Pradesh.

1. Kumbh Mela
2. Nauchandi Mela
3. Ganga Mela
4. Sikri Mela

Correct Option - 2

---

**Que. 37** Who discovered the antibiotic penicillin?

1. Archimedes
2. Alexander Fleming
3. Alexander Grahman Bell
4. Louis Pasteur

Correct Option - 2



---

**Que. 38** \_\_\_\_\_ of the Constitution of India provides a list of official languages of the Republic of India.

1. The Eleventh Schedule
2. The Fourth Schedule
3. The Twelfth Schedule
4. The Eight Schedule

Correct Option - 4

---

**Que. 39** पक्षी दाना चुग रहा है। - रेखांकित शब्द का पर्यायवाची शब्द नहीं है -

1. पंकज
2. अंडज
3. खग
4. नभचर

Correct Option - 1

---

**Que. 40** हमें अनाथ बच्चों की मदद करनी चाहिए। रेखांकित शब्द का विलोम बताइए।

1. सनाथ
2. अज्ञ
3. अपाहिज
4. जिसका कोई न हो

Correct Option - 1

---

**Que. 41** निम्नलिखित शब्दों में से कौन-सा शब्द अनेकार्थी नहीं है?

1. कनक
2. अनंत
3. महावीर
4. हत्या

Correct Option - 4

---

**Que. 42** जिसका सम्बन्ध अध्यात्म से है - के लिए एक ही शब्द होगा:

1. आध्यात्मिक
2. धार्मिक
3. शास्त्रीय
4. नैतिक

Correct Option - 1

---

**Que. 43** कौन-सा जोड़ा समरूपी भिन्नार्थक है?

1. अवधि - अवधी
2. अनुचर- नौकर
3. आदि - अन्त
4. अभिनय - नाटक

Correct Option - 1

**Que. 44** हमें प्रतिदिन सूर्य नमस्कार करना चाहिए। रेखांकित शब्द को पहचानिए।

1. उपसर्ग
2. अव्यय
3. सर्वनाम
4. कारक

Correct Option - 2

**Que. 45** मिलाप - शब्द में कौन-सा प्रत्यय है?

1. मिल
2. आप
3. अप
4. लाप

Correct Option - 2

**Que. 46** प्रति + आघात का संधि रूप क्या होगा?

1. प्रत्याघात
2. प्रतियाघात
3. प्रतीयाघात
4. प्रतीआघात

Correct Option - 1

**Que. 47** महौषध शब्द का संधि विच्छेद कीजिए

1. महा + ओषध
2. महा + औषधि
3. महा + औषध
4. मह + ओषधी

Correct Option - 3

**Que. 48** निम्नलिखित शब्दों में से तद्भव शब्द को पहचानिए।

1. पाषाण
2. कंगण
3. प्यासा
4. पक्ष

Correct Option - 3

**Que. 49** निम्नलिखित में से कौन-सा वाक्य अशुद्ध है?

1. आज मैं यहीं रहूँगा।
2. सज्जन लोग भला ही सोचते हैं।
3. क्या तुम कालेज जाते हो?

4. अभी तक पत्र नहीं मिला है।

Correct Option - 3

---

**Que. 50** मुझे आज खाने का मन नहीं होती हैं। अशुद्ध अंश स्पष्ट कीजिए।

1. मुझे
2. आज
3. खाने का
4. मन नहीं होती हैं।

Correct Option - 4

---

**Que. 51** वाक्य के कितने प्रकार हैं?

1. तीन
2. चार
3. एक
4. कोई प्रकार नहीं

Correct Option - 1

---

**Que. 52** वाक्य को समाप्त करने के लिए जिसका प्रयोग किया जाता है उसे कहते हैं:

1. अल्प विराम
2. पूर्ण विराम
3. विवरण चिह्न
4. उप विराम

Correct Option - 2

---

**Que. 53** माता-पिता लोहें के चने चबाकर बच्चों को पढ़ाते हैं। रेखांकित मुहावरा का अर्थ स्पष्ट कीजिए।

1. बहुत कठिनाई झेलना।
2. स्पष्ट बात करना।
3. बहुत ही विश्वास रखना।
4. बहुत ही आशा रखना।

Correct Option - 1

---

**Que. 54** "कहां राजा भोज, कहां गंगू तेली" लोकोक्ति अर्थ होगा:

1. विशिष्ट और सामान्य व्यक्ति की तुलना
2. दोनों बराबर होना
3. किसी तरह की जिम्मेदारी न उठाना
4. गुण

Correct Option - 1

---

**Que. 55** जहाँ एक ही वर्ण की बार-बार आवृत्ति होती वहाँ अलंकार होगा।

1. यमक
2. अनुप्रास

3. श्लेष
4. उपमा

Correct Option - 2

---

**Que. 56** जो मासिक सम छंद है | प्रत्येक चरण में मात्राएं होती है उसे कहते है:

1. चौपाई
2. दोहा
3. सोरठा
4. रोला

Correct Option - 1

---

**Que. 57** भीष्म पितामह ने आजीवन शादी न करने का प्रण लिया था | रेखांकित शब्द का समास होगा:

1. अव्ययीभाव समास
2. तत्पुरुष समास
3. कर्मधारय समास
4. द्विगु समास

Correct Option - 1

---

**Que. 58** करुण रस का स्थायी भाव होगा:

1. क्रोध
2. शोक
3. उत्साह
4. विस्मय

Correct Option - 2

---

**Que. 59** वर्णों के समुदाय को क्या कहते है?

1. वर्णमाला
2. सर्वनाम
3. अक्षर
4. क्रिया

Correct Option - 1

---

**Que. 60** निम्नलिखित शब्दों में से स्त्रीलिंग शब्द को पहचानिए |

1. संसार
2. गौरव
3. समुदाय
4. अश्विनी

Correct Option - 4

---

**Que. 61** निम्नलिखित में से कौन-सा जोड़ा सही नहीं है?

1. बेटी - बेटियाँ

2. डिबिया - डिबिये
3. श्रोता - श्रोतागण
4. वधू - वधुएँ

Correct Option - 2

---

**Que. 62** निम्नलिखित वाक्यों में से संबंध कारक वाले वाक्य को पहचानिए।

1. राम खाना खाता है।
2. राधा का कुत्ता बहुत तेज दौड़ता है।
3. राम ने रावण को मारा।
4. मां अपने बच्चे को मारती है।

Correct Option - 2

---

**Que. 63** निम्नलिखित शब्दों में से विशेषण को पहचानिए।

1. ऐतिहासिक
2. उपासना
3. आश्वासन
4. अपेक्षा

Correct Option - 1

---

**Que. 64** 'जागना' मूल रूप क्रिया का प्रथम प्रेरणार्थक रूप क्या होगा?

1. जगाना
2. जगवाना
3. जागवाना
4. जाग

Correct Option - 1

---

**Que. 65** निम्नलिखित वाक्यों में से पूर्ण वर्तमान काल को स्पष्ट कीजिए।

1. अब हमारे पढ़ने का समय हो गया है।
2. वह घूमने जा रही है।
3. वह पढ़ रहा था।
4. मैं बाहर जाऊँगी।

Correct Option - 1

---

**Que. 66** 'सुरेश गीत गा रहा था' वाक्य में काल है -

1. अपूर्ण भूत
2. पूर्ण भूत
3. सामान्य भूत
4. आसन्न भूत

Correct Option - 1

---

**Que. 67** निर्देश: निम्नलिखित गद्यांश को पढ़कर पूछे गए प्रश्न का उत्तर दीजिए -

भारत का गौरव बढ़ानेवाले महानुभावों में रबिन्द्रनाथ टैगोर का स्थान अग्रगण्य है। उनका जीवन सदैव प्रेरणादायी है। उनका जन्म 7 मई 1861 को कलकत्ता के एक बंगाली परिवार में हुआ था। उनके पिता का नाम देवेन्द्रनाथ और माता का नाम शारदादेवी था। उनके पिता ब्रह्म समाज के नेता थे। वे महान कवि, कहानीकार, गीतकार, चित्रकार, संगीतकार, नाटककार एवं सच्चे देशभक्त थे। उन्होंने 8 साल की छोटी उम्र में कविता लिखी थी, काबुलीवाला, मास्टर साहब, पोस्ट मास्टर जैसी अर्थस्पर्शी कहानियां हमें दी हैं। सन् 1878 में कानून की पढाई के लिए लंदन गए लेकिन साहित्यप्रेमी रबिन्द्रनाथजी 1880 में बिना उपाधि (डिग्री) लिए वापस आ गए। प्रकृति के प्रेमी से रबिन्द्रनाथजी ने शांतिनिकेतन की स्थापना की। 16 अक्टूबर 1905 को उनके नेतृत्व में कलकत्ता में रक्षाबंधन के उत्सव से बंग-भंग आन्दोलन का आरम्भ हुआ। इसी आन्दोलन से भारत में स्वदेशी आन्दोलन का सूत्रपात हुआ उनकी सबसे लोकप्रिय गीतांजलि रही जिस के लिए 1913 में उन्हें पुरस्कार प्रदान किया गया। सन् 1919 में हुए जलियांवाला हत्याकांड की उन्होंने भरपूर निन्दा की, उनका विरोध इतना तीव्र था कि उन्होंने 'नाईट हुड' उपाधि लौटा दी। भारत का राष्ट्रगान जन गण मन एवं बांग्लादेश का राष्ट्रीय गीत 'आमार सोनार बांग्ला' उनकी ही रचना है। सर्वतोमुखी प्रतिभा रखनेवाले रबिन्द्रनाथजी का निधन 7 अगस्त 1941 में कलकत्ता में हुआ। उनका जीवन सदैव पथ प्रदर्शक है।

'नाईट हुड' की उपाधि रबिन्द्रनाथ ने क्यों लौटायी:

1. उन्हें वह उपाधि नहीं पसन्द थी।
2. जलियांवाला बाग हत्याकांड के, विरोध में लौटायी थी।
3. बंग-भंग के आन्दोलन के विरोध में
4. ब्रिटिश शासन ने उनसे ले ली

Correct Option - 2

---

**Que. 68** रबिन्द्रनाथ टैगोर की कौन-सी रचना को नोबल पुरस्कार प्राप्त हुआ?

1. काबुलीवाला
2. मास्टर साहब
3. पोस्ट मास्टर
4. गीतांजलि

Correct Option - 4

---

**Que. 69** रबिन्द्रनाथ टैगोर का जन्म कब और कहाँ हुआ था?

1. 7 मई 1861 में कलकत्ता में
2. 2 अक्टूबर 1861 में गुजरात में
3. 14 नवम्बर 1869 में इलाहाबाद में
4. 5 सितम्बर 1889 में उत्तर प्रदेश में

Correct Option - 1

---

**Que. 70** उनके पिता कौन-से समाज के नेता थे?

1. ब्रह्म समाज
2. आर्य समाज
3. सत्यशोधक समाज
4. रामकृष्ण मिशन

Correct Option - 1

---

**Que. 71** 'जन गण मन' राष्ट्रगान के रचनाकार है:

1. रबिन्द्रनाथ टैगोर
2. बंकिम बाबू

3. हरिवंशराय बच्चनजी
4. सरोजिनी नायडू

Correct Option - 1

---

**Que. 72** निम्नलिखित कवियों में से गांधीजी ने किस कवि को राष्ट्रकवि का सम्मान दिया?

1. महादेवी वर्मा
2. जयशंकर प्रसाद
3. मैथिलीशरण गुप्त
4. सुमित्रानंदन पंत

Correct Option - 3

---

**Que. 73** 'देवदास' उपन्यास पर तीन बार फिल्म बन चुकी है। उपन्यासकार का क्या नाम है।

1. प्रेमचंदजी
2. शरतचन्द्र चट्टोपाध्याय
3. धर्मवीर भारती
4. रामचंद्र शुक्लाजी

Correct Option - 2

---

**Que. 74** 'कामायनी' के रचयिता कौन है?

1. जयशंकर प्रसादजी
2. महादेवी वर्मा
3. सूर्यकान्त त्रिपाठी
4. सुमित्रानंदन पंत

Correct Option - 1

---

**Que. 75** कौन-सी रचना तुलसीदासजी की नहीं है?

1. दोहावली
2. गीतावली
3. रामचरित मानस
4. यामा

Correct Option - 4

---

**Que. 76** Rashid can complete a job by himself in 15 days while kausik can do the same work alone in 21 days. If they work together how many days will it take them to complete the work?

1.  $8\frac{3}{4}$
2.  $9\frac{1}{4}$
3.  $8\frac{1}{4}$
4.  $9\frac{3}{4}$

Correct Option - 1

---

**Que. 77**

A ship developed a leak 15 km from the shore and yet could travel towards the shore at a speed of 10 km/hr for a maximum time of 18 min. A rescue vessel that was immediately sent from the shore to rescue the passengers would take 6 min to complete the rescue once it reaches the ship. What should be the minimum speed of the rescue vessel in order to be able to successfully evacuate everyone onboard the ship?

1. 72 km/hr
2. 70 km/hr
3. 68 km/hr
4. 65 km/hr

Correct Option - 4

---

**Que. 78** The length of a side of an equilateral triangle is 21 cm. what would be the approximate area of the circumcircle of the equilateral triangle.

[Use  $\pi = \frac{22}{7}$ ]

1.  $154\sqrt{3} \text{ cm}^2$
2.  $462\sqrt{3} \text{ cm}^2$
3.  $462 \text{ cm}^2$
4.  $484 \text{ cm}^2$

Correct Option - 3

---

**Que. 79** Zubin and Pravin can individually complete a job in 36 min and 60 min respectively. Starting with Zubin, they work alternately for a minute each till the work is completed, only the one working at the end allowed to work for less than a minute in his final turn. How long will it take the due to complete the job?

1. 45 min
2. 44min 48 s
3. 44 min 45 s
4. 45 min 12 s

Correct Option - 2

---

**Que. 80** Govinda usually leaves his home every day at 8 am and travels at a certain speed to reach office on time. One day, he travelled at  $\frac{4}{5}$  of the usual speed and hence arrived 22.5 min late. How much time does Govinda usually take to reach his office?

1. 1 hr 15 min
2. 1 hr 20 min
3. 1 hr 25 min
4. 1 hr 30 min

Correct Option - 4

---

**Que. 81** Select the option that is related to the third term in the same way as the second term is related to the first term.  
Saffron : Spice :: Apple : \_\_\_\_\_

1. Vegetable
2. Fruit
3. Stem
4. Root

Correct Option - 2



**Que. 82** 'Saliva' is to 'Salivary Glands' as 'Gastric Juice' is to '\_\_\_\_\_ '.

1. Stomach
2. Liver
3. Pancreas
4. Lungs

Correct Option - 1

**Que. 83** '\_\_\_\_\_ ' is to 'Celsius' as 'Mass' is to 'Grams'.

1. Heat
2. Humidity
3. Energy
4. Temperature

Correct Option - 4

**Que. 84** In a certain code language, MUMBAI is written as NTNABH. How will KANPUR be written as in the same language?

1. JBMQTS
2. NAKRUP
3. LZOOVQ
4. BLOQVS

Correct Option - 3

**Que. 85** 'Cake' is related to 'Oven' in the same way as 'Ice - cream' is related to '\_\_\_\_\_ '.

1. Filter
2. Non - stick Cookware
3. Refrigerator
4. Cooker

Correct Option - 3

**Que. 86** 'Meghalaya' is related to 'Shillong' in the same way as 'Nagaland' is related to '\_\_\_\_\_ '.

1. Daman
2. Itanagar
3. Kohima
4. Dispur

Correct Option - 3

**Que. 87** '100' is to 'Century' as '10' is to '\_\_\_\_\_ '.

1. Ten
2. Fortnight
3. Week
4. Decade

Correct Option - 4

**Que. 88** What will come next (in place of '?') given series?  
D4X24E5H8T20L?

- 1. 18
- 2. 26
- 3. 12
- 4. 7

Correct Option - 3

**Que. 89** How many 'M's are immediately preceded and followed by 'N' in the following series?  
M N N M N N M M M N N N O O M M M M N N M M M T T M N M N M N M N

- 1. 3
- 2. 5
- 3. 7
- 4. 4

Correct Option - 4

**Que. 90** What will come in place of the question mark (?) in the given series?  
21U13M22V18R?S

- 1. 22
- 2. 25
- 3. 19
- 4. 18

Correct Option - 3

**Que. 91** If GOOD = 41, then BAD = ?

- 1. 6
- 2. 12
- 3. 7
- 4. 10

Correct Option - 3

**Que. 92** If ACTIVE = 60, then PASSIVE = ?

- 1. 100
- 2. 80
- 3. 91
- 4. 55

Correct Option - 3

**Que. 93** If in a certain code, Silk is written as 1991211, then what will Cotton be written as in the same code?

- 1. 31514152020
- 2. 35201201514
- 3. 32015152014
- 4. 31520201514

Correct Option - 4

**Que. 94** A clock is showing the time 1:40. If the minute hand points to South - West, in which direction does the hour hand point?

1. North - East
2. South
3. North
4. South - East

Correct Option - 1

---

**Que. 95** Amal and Subir were standing face to face in the evening and chatting. Their shadows were in front of Subir. Which direction was Amal facing?

1. East
2. West
3. North
4. South

Correct Option - 2

---

**Que. 96** Consider the given statements to be true and decide which of the following conclusions logically follow(s) from the two given statements, disregarding commonly known facts.

**Statements:**

Some crows are pigeons

All the pigeons are peacocks.

**Conclusions:**

I. Some crows are peacocks.

II. No peacock is pigeon.

1. Only conclusion I follows
2. Only conclusion II follows
3. Neither conclusion I nor II follows
4. Both conclusions I and II follows

Correct Option - 1

---

**Que. 97** Consider the given statement and the following assumption to be true and decide which of the assumptions is/are implicit in the statement.

**Statement:**

Save non - renewable sources of energy for the next generation.

**Assumption:**

I. The next generation will have an renewable source of energy.

II. If non - renewable sources of energy go exhausted, the next generation will not be able to use them and will have to think of alternatives.

1. Only assumption I is implicit
2. Only assumption II is implicit
3. Neither assumption I nor II is implicit
4. Both assumptions I nor II are implicit

Correct Option - 2

---

**Que. 98** Consider the given statement and the following assumptions to be true and decide which of the assumptions is/are implicit in the statement.

**Statement:**

Like poles repel each other; unlike poles attract each other.

**Assumptions:**

I. Magnetic objects of similar pole repel each other.

II. People of opposite nature remain more intact

1. Only assumption I is implicit
2. Only assumption II is implicit
3. Neither assumption I nor II is implicit
4. Both assumption I and II is implicit

Correct Option - 1

---

**Que. 99** Which of the following is NOT a composite number?

1. 133
2. 433
3. 533
4. 833

Correct Option - 2

---

**Que. 100** Select the most appropriate option to solve the equation.

$$105 \div 15 \times \{(38 - 8) \div 5\} \div 3 =$$

1. 7
2.  $3\frac{1}{2}$
3. 14
4.  $10\frac{1}{2}$

Correct Option - 3

---

**Que. 101** Select the most appropriate option to solve the equation

$$1.8 \div 1200 =$$

1. 0.15
2. 0.015
3. 0.00015
4. 0.0015

Correct Option - 4

---

**Que. 102** Select the most appropriate option to solve the equation.  $\frac{11}{8} \div \frac{33}{56} =$

1.  $3\frac{1}{7}$
2.  $7\frac{1}{3}$
3.  $3\frac{1}{2}$
4.  $2\frac{1}{3}$

Correct Option - 4

---

**Que. 103** What is the HCF of 54, 162 and 189?

1. 27
2. 9
3. 3

4. 1

Correct Option - 1

---

**Que. 104** What is the LCM of 64, 128 and 160?

1. 320
2. 384
3. 512
4. 640

Correct Option - 4

---

**Que. 105** If 84 is divided in the ratio 5 : 9, what is the greater of the two parts?

1. 54
2. 63
3. 57
4. 48

Correct Option - 1

---

**Que. 106** If  $x : 16 :: 63 : 36$ , then  $x =$

1. 20
2. 24
3. 28
4. 30

Correct Option - 3

---

**Que. 107** Rishi secured 66 marks in a test out of 80. What was the percentage of marks obtained by Rishi?

1. 84
2. 88
3. 87.5
4. 82.5

Correct Option - 4

---

**Que. 108** Irene suffered a loss of 12% by selling a mask for Rs. 308. At what selling price would she have made a profit of 10%?

1. Rs. 396
2. Rs. 363
3. Rs. 374
4. Rs. 385

Correct Option - 4

---

**Que. 109** After a discount of 15% on the marked price of a set of pens, it still cost the buyer Rs. 1,751. What was the marked price of the set of pens?

1. Rs. 2,025
2. Rs. 2,000
3. Rs. 2,060
4. Rs. 1,989

Correct Option - 3

**Que. 110** Rs. 1,800, invested for 5 years at 8% simple interest per annum, will earn an interest of Rs. \_\_\_\_.

- 1. 720
- 2. 750
- 3. 630
- 4. 675

Correct Option - 1

**Que. 111** What would be the interest accrued in two years on Rs. 300 if the sum is invested at 10% interest compounded annually?

- 1. Rs. 60.50
- 2. Rs. 60
- 3. Rs. 61.50
- 4. Rs. 63

Correct Option - 4

**Que. 112** Suhas and Nitin invested some money in a business in the ratio 8 : 3, but Suhas withdrew his money after a few months. If at the end of twelve months' profit was shared by Suhas and Nitin in the ratio 5 : 4, for how many months did Nitin invest alone ?

- 1.  $5\frac{5}{8}$
- 2.  $6\frac{3}{8}$
- 3.  $5\frac{3}{8}$
- 4.  $6\frac{5}{8}$

Correct Option - 2

**Que. 113** The average marks obtained by 5 students is 55. The average score of the top three performers out of five is 65. What is the average score of the other two?

- 1. 50
- 2. 45
- 3. 40
- 4. 35

Correct Option - 3

**Que. 114** Select the option that is related to the third term in the same way as the second term is related to the first term?  
82 : 64 :: 92 : ?

- 1. 81
- 2. 90
- 3. 49
- 4. 100

Correct Option - 1

**Que. 115** If 'MATTER' can be coded as 'AMTTRE' then how would you code 'LENGTH'?

- 1. HTGNEL

2. ELGTHN
3. ELNGHT
4. ENLGHT

Correct Option - 3

---

**Que. 116** If 'METHOD' can be coded as 'EMHTDO' then how would you code 'PRACTICE'

1. RPACITCE
2. RPCAITEC
3. RPCATIEC
4. RPCATICE

Correct Option - 2

---

**Que. 117** In a code language if MANGO is written as OGNAM, then what will be the code for APPLE?

1. APLPE
2. APPEL
3. ELPAP
4. ELPPA

Correct Option - 4

---

**Que. 118** If 'CHANTING' can be coded as 'HCNAITGN', then how would you code 'PINCHING'?

1. IPNCHIGN
2. IPCNIHGN
3. IPCNHIGN
4. GNIHCNIP

Correct Option - 2

---

**Que. 119** Speaking to Kamala, Rajesh said "My mother is the only daughter of your father". How is Kamala related to Rajesh?

1. Mother
2. Aunt
3. Wife
4. Daughter

Correct Option - 1

---

**Que. 120** M is the sister of N, R is the niece of M and T is the mother of R. How is N related to T?

1. Brother
2. Daughter
3. Husband
4. Nephew

Correct Option - 3

---

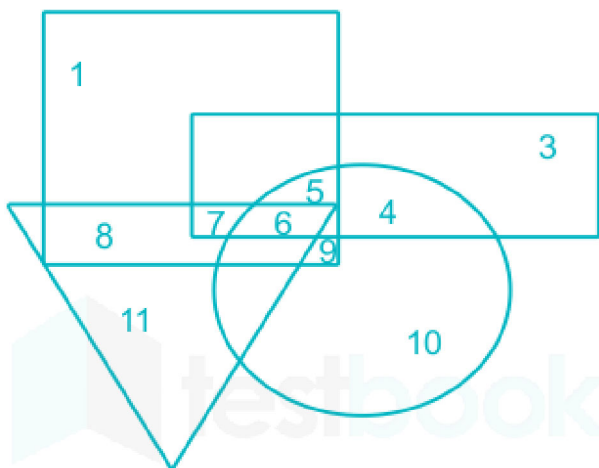
**Que. 121** Maya is Gopal's wife. Preethi's husband, Naresh has a sister, Jaya and a brother, Gopal. How is Naresh related to Maya?

1. Father - in - law
2. Son

- 3. Son - in - Law
- 4. Brother - in - law

Correct Option - 4

**Que. 122** Which of the following numbers in the Venn diagram shows the only soft cotton shirt?



- ☐ Soft
- ☐ Lucknow
- ☐ Cotton
- ☐ Shirt

- 1. 6
- 2. 5
- 3. 9
- 4. 7

Correct Option - 2

**Que. 123** Find the suitable option for the given Venn diagram.

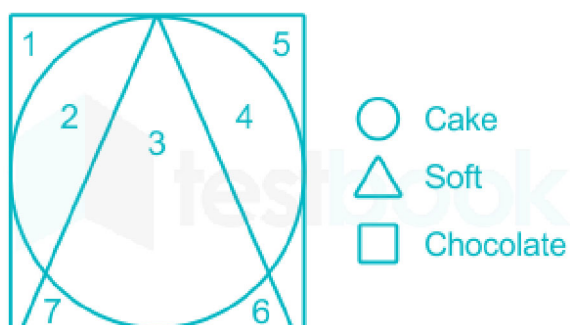


- 1. Family, husband, wife
- 2. Peacocks, crow, cocks
- 3. Cows, figures, lions
- 4. Cats, dogs, frogs

Correct Option - 1

**Que. 124** What does the number 3 in the Venn diagram below describe?





1. A cake which is not soft
2. A soft cake which is made of chocolate
3. A soft cake which is not made of chocolate
4. A soft chocolate

Correct Option - 2

**Que. 125** Which of the following numbers in the Venn diagram represents a warm and rainy day?



1. 6
2. 7
3. 5
4. 4

Correct Option - 3

**Que. 126** Which of the following options best suit the Venn diagram given in the figure?



1. English, Tamil, Hindi
2. Women, mothers, doctors
3. Passenger, bus, train
4. Pollution, air, water

Correct Option - 1

Select the odd one out among the following:

**Que. 127** 9876

2. 8765
3. 5432
4. 7653

Correct Option - 4

---

**Que. 128** Which word does NOT belong with the others?

1. Square
2. Pentagon
3. Hexagon
4. Angle

Correct Option - 4

---

**Que. 129** Which word does NOT belong with the others?

1. Sitting
2. Crying
3. Standing
4. Sleeping

Correct Option - 2

---

**Que. 130** Which alphabet is NOT similar to the others?

1. A
2. U
3. D
4. O

Correct Option - 3

---

**Que. 131** Which word does NOT belong with the others?

1. Earrings
2. Bracelet
3. Bangles
4. Spectacles

Correct Option - 4

---

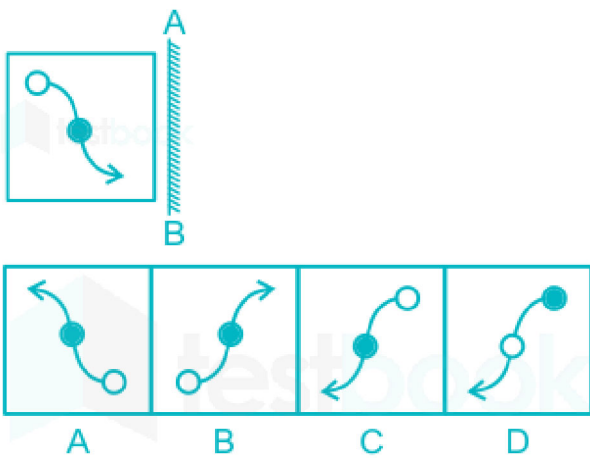
**Que. 132** Which word does NOT belong with the others?

1. Edges
2. Sides
3. Faces
4. Vertices

Correct Option - 4

---

**Que. 133** Choose the correct mirror image of the object given from the choices, when the mirror is held at A B:



1. A
2. B
3. C
4. D

Correct Option - 3

**Que. 134** Identify the odd pair:

1. Husband - Wife
2. Father - Daughter
3. Uncle - Niece
4. Mother- Son

Correct Option - 1

**Que. 135** Consider the four members of this set:  
Coconut, Groundnut, Mustard, Corn





Which of the choices below can be a part of the above set?

1. Cashew nut
2. Cocoa
3. Olive
4. Almond

Correct Option - 1

**Que. 136** Which of the following options has the correct water image of the picture given below:






1.  

2.  

3.  

4.  


Correct Option - 2

**Que. 137** Select the suitable figure from the answer figures that would replace the question mark?

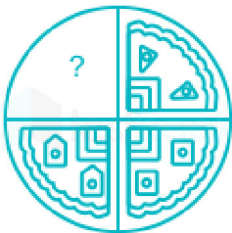
ON E	TH RE E	FI VE	?
---------	---------------	----------	---

1.  

2.  

3.  




Correct Option - 2

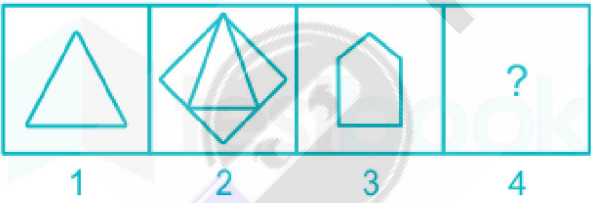
**Que. 138** Select a suitable figure from the Answer Figures that would replace the question mark.



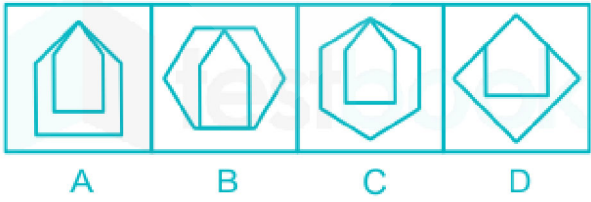
- 1.
- 
- 2.
- 
- 3.
- 
- 4.
- 

Correct Option - 4

**Que. 139** The first two figures in the given Prob Set bear a relationship. Select the figure from the Answer Set which bears the same relationship to the third figure in the Problem Set as the second one bears to the first in the Problem Set.




Answer Set:



1. A  
2. B  
3. C  
4. D

Correct Option - 2

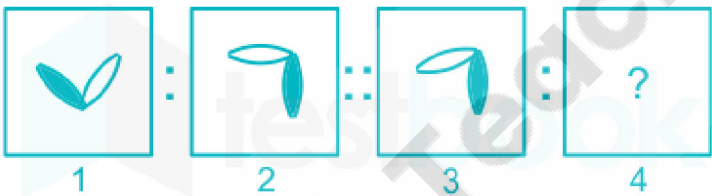
**Que. 140** Select a suitable figure from the Answer Figures that would replace the question mark.



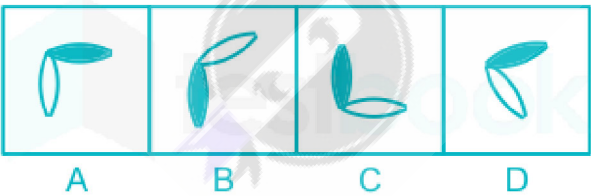
- 1.
- 2.
- 3.
- 4.

Correct Option - 1

**Que. 141** The first two figures in the Problem Figure bear a relationship. Select the figure from the Answer Figure which bears the same relationship to the third Problem Figure as the second bears to the first Problem Figure Problem Figure:



Answer Figure:



- 1. Figure A
- 2. Figure B
- 3. Figure C
- 4. Figure D

Correct Option - 4

**Que. 142** Read the statements and identify the logically correct conclusion from the given information.

**Statements:**

"The beginning of health is sleep" - written on a hospital wall

**Conclusion:**

- I) If one sleeps, all his diseases get cured.  
II) Sleep is the medicine for all the diseases.
1. Only conclusion I follows
  2. Only conclusion II follows
  3. Either conclusion I or II follows
  4. Neither conclusion I nor II follows

Correct Option - 4

---

**Que. 143** Consider the statements to be true if they seem to be at variance from common known facts. Decide which of the given conclusions logically follows from the two given statements, disregarding commonly known facts.

**Statements:**

Some crows are lions.

All lions are panthers.

**Conclusions:**

1. Some crows are panthers.
2. No lion is a crow.
1. Only conclusion I follows
2. Only conclusion II follows
3. Neither conclusion I nor II follows
4. Both conclusions I and II follow

Correct Option - 1

---

**Que. 144** Consider the statements to be true even if they seem to be at variance from commonly known facts. Decide which of the given conclusions logically follows from the statements.

**Statements:**

Most teachers are boys.

Some boys are students.

**Conclusions:**

- I) Some students are boys.  
II) Some teachers are students.
1. Only conclusion I follows
  2. Only conclusion II follows
  3. Both, conclusions I and II follows
  4. Neither conclusions I nor II follows

Correct Option - 1

---

**Que. 145** Select the option that represents the number which is related to the fourth number in the same way as the first number is related to the second number.

7 : 50 :: ? : 101

1. 5
2. 10
3. 11
4. 38

Correct Option - 2

**Que. 146** Select the option that is related to the third term in the same way as the second term is related to the first term.  
 $258 : 80 :: 369 : ?$

1. 162
2. 18
3. 90
4. 54

Correct Option - 1

---

**Que. 147** What will come in place of the blank in the series?  
3, 15, 35, 63, \_\_\_\_\_, 143,

1. 89
2. 78
3. 99
4. 121

Correct Option - 3

---

**Que. 148** Find the next letter in the series.  
Z, X, V, T, \_\_\_\_\_

1. Q
2. R
3. S
4. A

Correct Option - 2

---

**Que. 149** Identify the number that follows the series.  
2, 5, 10, 17, \_\_\_\_\_

1. 18
2. 28
3. 27
4. 29

Correct Option - 2

---

**Que. 150** Insert the correct option in the blank below:  
A1, E5, K11, \_\_\_\_\_, C29

1. S17
2. S19
3. M13
4. M17

Correct Option - 2