



Teachingninja.in



Latest Govt Job updates



Private Job updates



Free Mock tests available



Visit - teachingninja.in

UP Police Constable

Previous Year Paper

18 June 2018 Shift 1



150 Questions

Que. 1 How many trans-border trains operate between India and Pakistan?

1. 4
2. 1
3. 2
4. 3

Correct Option - 3

Que. 2 Which company was recently implicated in a global data theft crime?

1. Amazon
2. Google
3. Cisco
4. Cambridge Analytica

Correct Option - 4

Que. 3 In December 2017, the 15th Russia - India - China Trilateral Foreign Minister Meeting was held in ____.

1. Shanghai
2. Beijing
3. Moscow
4. New Delhi

Correct Option - 4

Que. 4 The large-scale expansion of the British rule in India occurred through subsidiary alliances, which was started during the Governor-General ship of ____.

1. Lord Warren Hastings
2. Lord Cornwallis
3. Lord Wellesley
4. Lord Clive

Correct Option - 3

Que. 5 After the death of Guru Gobind Singh, the institution of Guruship came to an end the leadership of the Sikhs passed to his trusted discipline ____.

1. Ranjit Singh
2. Banda Bahadur
3. Ajit Singh
4. Jujhar Singh

Correct Option - 2

Que. 6 The name Pakistan was first coined by ____.

1. Mohammad Iqbal
2. Mohammad Ali Jinnah
3. Choudhry Rahmat Ali
4. Maulana Azad

Correct Option - 3

Que. 7 Rabindranath Tagore renounced his knighthood in protest of the _____.

1. Cabinet Mission
2. Jallianwala Bagh massacre
3. Rowlatt Act
4. Simon Commission

Correct Option - 2

Que. 8 The river Godavari originates in the state of _____.

1. Madhya Pradesh
2. Chhattisgarh
3. Maharashtra
4. Odisha

Correct Option - 3

Que. 9 Which of the following is the largest freshwater lake in India?

1. Dal Lake
2. Loktak
3. Chilika
4. Wular

Correct Option - 4

Que. 10 The law - making procedure in the Indian Constitution has been unconsiderably influenced by the Constitution of _____.

1. South Africa
2. Germany
3. Japan
4. The USA

Correct Option - 3

Que. 11 The Right to Education (RTE) Act was enacted by the Parliament of India in the year _____.

1. 2006
2. 2007
3. 2008
4. 2009

Correct Option - 4

Que. 12 Maharaja Sawai Jai Singh (Jai Singh II) set an astronomical observatory at _____.

1. Ujjain
2. Shimla
3. Bharatpur
4. Jodhpur

Correct Option - 1

Que. 13 The Union Health Ministry launched a single vaccine for dual protection against _____ as part of the Universal Immunisation Programme.

1. Measles and rubella
2. Measles and Mumps
3. Measles and Tuberculosis
4. Mumps and Influenza

Correct Option - 1

Que. 14 Which of the following districts of Uttar Pradesh has the highest population as per the 2011 census?

1. Gorakhpur
2. Lucknow
3. Allahabad
4. Bareilly

Correct Option - 3

Que. 15 Which one of the following princely states announced its accession to Pakistan in but was later forced to join India after the plebiscite result?

1. Rampur
2. Junagarh
3. Faridkot
4. Porbander

Correct Option - 2

Que. 16 Which one of the following Indian states, does **NOT** have the Tropic of Cancer passing through it?

1. Rajasthan
2. Tripura
3. Mizoram
4. Uttar Pradesh

Correct Option - 4

Que. 17 Which of the following Indian states **does NOT** have a bicameral legislative?

1. Uttar Pradesh
2. Maharastra
3. Tamil Nadu
4. Karnataka

Correct Option - 3

Que. 18 Who was the chairman of the Union Power Committee of the Constituent Assembly of India?

1. Dr. Rajendra Prasad
2. J. B. Kripalani
3. Sardar Vallabhbhai Patel
4. Jawaharlal Nehru

Correct Option - 4

Que. 19 The ancient mathematics book Ganita - Sara - Sangraha was authored by _____.

1. Bhaskaracharya
2. Mahaviracharya
3. Aryabhata
4. Brahmagupta

Correct Option - 2

Que. 20 Who has written an English book "Unleashing India" which outlines how India can become a super power in 25 to 30 years?

1. Veerappa Moily
2. SM Krishna
3. Shashi Tharoor
4. Manohar Parrikar

Correct Option - 1

Que. 21 Indian Railways started the first Humsafar class of trains between Anand Vihar and _____.

1. Allahabad
2. Gorakhpur
3. Varanasi
4. Ballia

Correct Option - 2

Que. 22 The famous Sufi Saint Sheikh Salim Chisti's Dargah is situated at _____ in Uttar Pradesh.

1. Jaunpur
2. Kannauj
3. Fatehpur Sikri
4. Barabanki

Correct Option - 3

Que. 23 Which is the third highest peak in the Himalayas?

1. Mount Lhotse
2. Mount Makalu
3. Mount Fuji
4. Mount Kanchenjunga

Correct Option - 4

Que. 24 What is the state flower of Uttar Pradesh?

1. Rose
2. Marigold
3. Jasmine
4. Palash

Correct Option - 4

Que. 25 Where is bile produced in humans?

1. Stomach
2. Pancreas

3. Liver
4. Gallblader

Correct Option - 3

Que. 26 When was the National Human Rights Commission set up in India?

1. 2000
2. 1995
3. 1993
4. 1950

Correct Option - 3

Que. 27 Which of the following diseases are caused by fungi?

1. Tonsillitis
2. Gallstones
3. Heart attack
4. Ringworm

Correct Option - 4

Que. 28 Which Indian state accounts more than one - third of sugar production and output as of 2016 - 17?

1. Gujarat
2. Uttar Pradesh
3. Maharashtra
4. Karnataka

Correct Option - 2

Que. 29 The original document of the Constitution of India was handwritten by _____.

1. Dr. B.R. Ambedkar
2. Sarojini Naidu
3. Prem Behari Narain Raizada
4. Dr. Rajendra Prasad

Correct Option - 3

Que. 30 What is the chemical name for Vitamin B7?

1. Panotothenic Acid
2. Biotin
3. Ascorbic Acid
4. Folic Acid

Correct Option - 2

Que. 31 Where was the hockey legend Major Dhyan Chand born?

1. Kanpur
2. Lucknow
3. Meerut
4. Allahabad

Correct Option - 4

Que. 32 Where was Munshi Premchand born?

1. Kanpur
2. Arampur
3. Ghaziabad
4. Varanasi

Correct Option - 4

Que. 33 Which of the following is the oldest university in Uttar Pradesh?

1. Aligarh Muslim University
2. Banaras Hindu University
3. Mahatma Gandhi vidyapeeth
4. Allahabad Central University

Correct Option - 4

Que. 34 Which Uttar Pradesh city is known as the 'Grasse on the East'?

1. Gorakhpur
2. Moradabad
3. Banaras
4. Kannauj

Correct Option - 4

Que. 35 Which neighbouring country is known as the 'Land of the Thunder Dragon'?

1. Burma
2. Nepal
3. Bangladesh
4. Bhutan

Correct Option - 4

Que. 36 Kazuo Ishiguro won the Nobel Prize in 2017 for which discipline?

1. Chemistry
2. Physics
3. Mathematics
4. Literature

Correct Option - 4

Que. 37 Who was the first woman Leader of the Opposition in the Pakistan Senate?

1. Bilawal Bhutto Zardari
2. Benazir Bhutto
3. Sherry Rahman
4. Mumtaz Mahal

Correct Option - 3

Que. 38 What is India's cruise missile with seeker technology called?

1. Prithvi
2. Garuda
3. BrahMos
4. Narayan

Correct Option - 3

Que. 39 निम्न में से कौन-सा शब्द पुल्लिंग है?

1. इच्छा
2. राष्ट्र
3. रक्षा
4. योग्यता

Correct Option - 2

Que. 40 किस शब्द का प्रयोग सदा बहुवचन में होता है?

1. लड़का
2. घोड़ा
3. प्राण
4. वधू

Correct Option - 3

Que. 41 'ने' किस कारक का चिह्न है?

1. कर्ता
2. कर्म
3. करण
4. संप्रदान

Correct Option - 1

Que. 42 निम्नलिखित में सर्वनाम है-

1. घर
2. आप
3. पहाड़
4. नदी

Correct Option - 2

Que. 43 निम्नलिखित में विशेषण है-

1. लम्बाई
2. बुढ़ापा
3. समझ
4. शांत

Correct Option - 4

Que. 44 प्रेरणार्थक क्रिया है-

1. गिरना
2. बोलना
3. सुनाना
4. कहना

Correct Option - 3

Que. 45 'लड़के ने पुस्तक पढ़ी है।' वाक्य का काल है-

1. सामान्य वर्तमान
2. पूर्ण वर्तमान
3. संदिग्ध वर्तमान
4. संभाव्य वर्तमान

Correct Option - 2

Que. 46 निम्नलिखित में तद्भव शब्द है-

1. अचरज
2. अंधकार
3. अंगरक्षक
4. आशा

Correct Option - 1

Que. 47 'शीत' का विलोम होगा-

1. ठण्ड
2. गीत
3. कृष्ण
4. उष्ण

Correct Option - 4

Que. 48 'कर' का अर्थ नहीं होता है-

1. सूर्य
2. हाथ
3. किरण
4. टैक्स

Correct Option - 1

Que. 49 'जो कठिनाई से मिलता है' के लिए एक शब्द होगा-

1. दुर्गम
2. दुर्लभ
3. अगम
4. सुलभ

Correct Option - 2

Que. 50 'अनिल-अनल' का सही अर्थ देने वाला शब्द युग्म है-

1. वायु - अग्नि
2. अग्नि - वायु
3. हवा - पानी
4. आग - पानी

Correct Option - 1

Que. 51 'पराजय' में उपसर्ग है-

1. प
2. पर
3. परा
4. जय

Correct Option - 3

Que. 52 'लिखावट' में प्रत्यय है-

1. अट
2. वट
3. अवट
4. आवट

Correct Option - 4

Que. 53 महोत्सव का संधि-विच्छेद है-

1. महो + उत्सव
2. महा + उत्सव
3. महि + उत्सव
4. म + उत्सव

Correct Option - 2

Que. 54 'मैंने घर जाना था।' वाक्य में अशुद्ध अंश है-

1. मैंने
2. घर
3. जाना
4. था।

Correct Option - 1

Que. 55 'देशभक्ति' में समास है-

1. द्वंद्व
2. द्विगु
3. तत्पुरुष

4. अव्ययीभाव

Correct Option - 3

Que. 56 'गोली चलाई जाती है।' में कौन-सा वाच्य है?

1. कर्तृ वाच्य
2. कर्म वाच्य
3. भाव वाच्य
4. क्रिया वाच्य

Correct Option - 2

Que. 57 निम्नलिखित में से अव्यय है-

1. प्राचीन
2. मोटा
3. गरीब
4. और

Correct Option - 4

Que. 58 हिन्दी में पूर्ण-विराम का चिह्न है-

1. !
2. .
3. |
4. ?

Correct Option - 3

Que. 59 'दूध का धुला होना' मुहावरे का अर्थ है-

1. निर्दोष होना
2. दोषी होना
3. पाप करना
4. चोरी करना

Correct Option - 1

Que. 60 'जिसकी लाठी उसकी भैंस' लोकोक्ति का सही अर्थ है-

1. शक्तिशाली आदमी मूर्ख होता है।
2. शक्ति सम्पन्न आदमी अपना काम बना लेता है।
3. बुद्धि सम्पन्न आदमी अपना काम बना लेता है।
4. बुद्धि सम्पन्न आदमी चालाक होता है।

Correct Option - 2

Que. 61 वीर रस का स्थायी भाव है-

1. क्रोध
2. भय

3. विस्मय
4. उत्साह

Correct Option - 4

Que. 62 'दोहा के प्रथम चरण में कितनी मात्राएं होती हैं?

1. 11
2. 12
3. 13
4. 14

Correct Option - 3

Que. 63 निम्नलिखित में कौन-सा शब्दालंकार है?

1. उपमा
2. रूपक
3. उत्प्रेक्षा
4. यमक

Correct Option - 4

Que. 64 निम्न में से तालव्य ध्वनि है-

1. ट
2. प
3. श
4. क

Correct Option - 3

Que. 65 निम्न में से कौन-सा वर्ण अघोष है?

1. क
2. ग
3. घ
4. ज

Correct Option - 1

Que. 66 निम्न में से कौन-सा स्त्रीलिंग है?

1. उपहार
2. ग्रन्थ
3. मस्तक
4. रचना

Correct Option - 4

Que. 67 निर्देश: निम्नलिखित गद्यांश को पढ़िए और पूछे गए प्रश्नों के सही उत्तर वाले विकल्प चुनिए-

भारत ने स्वाधीनता प्राप्त करने के बाद अनेक क्षेत्रों में महत्वपूर्ण उपलब्धियाँ प्राप्त की है। जब हम स्वतंत्र हुए तो उस समय हमारी स्थिति अच्छी न थी। सरकारी प्रयासों से काफी सुधार हुआ परन्तु अभी भी एक क्षेत्र ऐसा है जिसमें हम अभी तक कुछ विशेष नहीं कर पाए। वह क्षेत्र है - खेलों का। इससे बड़ी विडम्बना और क्या हो सकती है कि वर्षों से हम ओलम्पिक में कोई भी स्वर्णपदक नहीं जीत पाए। दुनिया के छोटे-छोटे अविकसित, निर्धन राष्ट्रों के प्रतिभागी भी खेलकूद के क्षेत्र में हमसे आगे निकल गए हैं। कभी हॉकी का विशेष चैंपियन रहने वाला भारत आज इस खेल में अपनी प्रतिष्ठा खो चुका है। खेलों में गिरते स्तर के लिए कौन जिम्मेदार है? एक ओर सरकार की उदासीन दोषपूर्ण सरकारी नीतियाँ हैं तो दूसरी ओर विभिन्न खेल संघों की गुटबाजी, खिलाड़ियों के लिए सुविधाओं एवं प्रशिक्षण का सर्वथा अभाव या कुछ और प्रतिभागिताओं में भाग लेकर खाली हाथ लौटने पर सभी एक दूसरे को दोषी बताते हैं। कारण चाहे जो भी हो इतना तय है कि खेलकूद को राष्ट्रीय सम्मान का पर्याय नहीं मानते। अभाव प्रतियोगिताओं का नहीं, अभाव है तो लगन का, प्रोत्साहन का, संकल्प का और मुँहतोड़ जवाब देने वाले जीवट का।

खेलों में निर्धन राष्ट्र भी हमसे आगे निकल गए क्योंकि वहाँ है-

1. आपसी गुटबंदी
2. खिलाड़ियों की उपेक्षा
3. दोषपूर्ण नीतियाँ
4. खेलों का राष्ट्र सम्मान

Correct Option - 4

Que. 68 गद्यांश का उपयुक्त शीर्षक हो सकता है-

1. स्वतंत्रता प्राप्ति
2. खेलों का गिरता स्तर
3. ओलंपिक पदक
4. राष्ट्रीय प्रतियोगिताएँ

Correct Option - 2

Que. 69 खेलों के गिरते स्तर का कारण नहीं है-

1. दोषपूर्ण नीतियाँ
2. संघों की गुटबाजी
3. सुविधाओं का अभाव
4. खेलों के लिए राष्ट्रीय सम्मान

Correct Option - 4

Que. 70 खेलों पर नकारात्मक प्रभाव पड़ता है-

1. खिलाड़ियों को सुविधा देने से
2. अभ्यास करने से
3. आपसी गुटबंदी होने से
4. खिलाड़ियों को सन्मान देने से।

Correct Option - 3

Que. 71 गद्यांश के अनुसार राष्ट्र की उपलब्धियों में नहीं है-

1. शिक्षा
2. स्वास्थ्य
3. खेल

4. कृषि

Correct Option - 3

Que. 72 'कामायनी' के रचनाकार है-

1. जयशंकर प्रसाद
2. सुमित्रानन्दन पंत
3. सूर्यकान्त त्रिपाठी 'निराला'
4. महादेवी वर्मा

Correct Option - 1

Que. 73 'गोदान' किसका उपन्यास है?

1. यशपाल
2. प्रेमचन्द
3. भीष्म साहनी
4. अमरकान्त

Correct Option - 2

Que. 74 'बीजक' किसकी रचनाओं का संग्रह है?

1. कबीर
2. जायसी
3. सूरदास
4. तुलसीदास

Correct Option - 1

Que. 75 'अंधेर नगरी' नाटक के रचयिता हैं-

1. जयशंकर प्रसाद
2. मोहन राकेश
3. भारतेन्दु हरिश्चंद्र
4. भीष्म साहनी

Correct Option - 3

Que. 76 What will be written in place of the question mark in the given series?

B2R18T20H?

1. 6
2. 7
3. 8
4. 9

Correct Option - 3

Que. 77 What will be the 29th letter of the sequence: a, b, b, c, c, c, d, d, d, d, _____?

1. f
2. g

- 3. h
- 4. i

Correct Option - 3

Que. 78 How many T's are immediately followed by 'IE' in the following series?
E T I E T T M E E E T E I T E T E T T I E E T T I E T I E E E T E I T E T E T E T E I E T I E

- 1. 4
- 2. 7
- 3. 6
- 4. 5

Correct Option - 4

Que. 79 Ramesh goes towards North, turns right, then turns right again and then goes to the left. Which direction is Ramesh facing now?

- 1. East
- 2. West
- 3. North
- 4. South

Correct Option - 1

Que. 80 **Directions:** Read the information given below carefully and answer the questions accordingly:
Sunita goes towards the south, turns left, then turns right and then goes to the left. Which direction is Sunita facing now?

- 1. East
- 2. West
- 3. North
- 4. South

Correct Option - 1

Que. 81 Read the following question and decide which of the arguments that follow are strong.

Question:

Should a child from a not so affluent family in India be allowed to follow his/her passion?

Arguments:

- 1) Yes, these days if child is allowed pursue his/her she/he can excel in it even financially
- 2) No, even today our country does not have a strong social security system and establishing oneself in unconventional fields is time - consuming and can be financially taxing
- 1. Only Argument I is strong
- 2. Only Argument II is strong
- 3. Neither Argument I nor Argument II is strong
- 4. Both Argument I and Argument II are strong

Correct Option - 1

Que. 82 Read the following question and decide which of the arguments that follow is/are strong.

Question:

Should parents invest as much in educating their daughters as much as they spend on educating their sons?

Arguments:

- 1) No, almost all data points to the fact that boys are way more intelligent than girls.
- 2) No, though girls may be intelligent, parents have to keep money aside for their marriages.
 1. Only Argument I is strong
 2. Only Argument II is strong
 3. Neither Argument I nor 2 is strong
 4. Both Arguments I and 2 are strong

Correct Option - 3

Que. 83 Read the following question and decide which of the arguments that follow are strong.

Question:

Should a cricket team have more than one captain during a match?

Arguments:

- 1) No, one needs to make decisions the spot and there won't be time to resolve conflicting ideas between the captains on the field if such a senario emerges
- 2)Yes, it is always better to take more brains coming to the understanding before taking any decision.
 1. Only Argument I is strong
 2. Only Argument II is strong
 3. Neither Arguments I nor 2 is strong
 4. Both Arguments I and 2 are strong

Correct Option - 1

Que. 84 Which of the numbers given below is NOT a square number?

1. 1225
2. 2025
3. 2525
4. 4225

Correct Option - 3

Que. 85 Select the most appropriate option to solve the equation.

$$60 \div 5 \times (16 - 8 \div 2) \div 3 = ?$$

1. 48
2. 16
3. 1
4. 32

Correct Option - 1

Que. 86 Select the most appropriate option to solve the equation $9.87 + 6.54 + 3.21 = ?$

1. 19.62
2. 18.62
3. 19.72
4. 18.52

Correct Option - 1

Que. 87 Select the most appropriate option.

What is the difference between $\frac{4}{5}$ and $\frac{2}{3}$?

1. $\frac{4}{15}$
2. $\frac{2}{15}$
3. $\frac{2}{2}$
4. $\frac{2}{5}$

Correct Option - 2

Que. 88 Find the HCF of 30, 60 and 72.

1. 2
2. 3
3. 6
4. 12

Correct Option - 3

Que. 89 Select the most appropriate option. Find the LCM of 15, 30 and 24.

1. 60
2. 240
3. 180
4. 120

Correct Option - 4

Que. 90 If 21 chocolates are shared in the ratio 5 : 2, the smaller share will be _____ chocolates.

1. 3
2. 6
3. 9
4. 10

Correct Option - 2

Que. 91 Mahim secured 126 marks in a test out of 175. What was the percentage of marks obtained by Mahim?

1. 75%
2. 72%
3. 70.5%
4. 70%

Correct Option - 2

Que. 92 Select the most appropriate option. What is 12% of 35?

1. 4.6
2. 4.4
3. 4.2
4. 4.05

Correct Option - 3

Que. 93 By selling an item for Rs. 434, Ramesh makes a profit of 24%. What was the rate at which Ramesh purchased pen?

1. Rs. 350
2. Rs. 360
3. Rs. 340
4. Rs. 375

Correct Option - 1

Que. 94 After a discount of 12%, a toy was sold for Rs. 132. What was the marked price of the toy?

1. Rs. 140
2. Rs. 175
3. Rs. 150
4. Rs. 160

Correct Option - 3

Que. 95 The interest earned on Rs. 2500 deposited for 3 years at 4% p.a is:

1. Rs. 240
2. Rs. 250
3. Rs. 288
4. Rs. 300

Correct Option - 4

Que. 96 What will be the interest earned on Rs. 1,400 for two years if the interest is compounded annually at 10% per annum?

1. Rs. 288
2. Rs. 294
3. Rs. 302
4. Rs. 308

Correct Option - 2

Que. 97 Ravi and Rashmi invested Rs. 150 and Rs. 200 respectively in a business but Ravi withdrew his money after a few months. If the end - of - twelve - months' profit was shared between Ravi and Rashmi in the ratio 1 : 2, after how many months did Ravi take out his money?

1. 4
2. 6
3. 8
4. 10

Correct Option - 3

Que. 98 The average of 18, 27 and the number is 30. What is the third number?

1. 35
2. 36
3. 40
4. 45

Correct Option - 4

Que. 99

Person A can complete a job in 48 min while B can complete the same job in 60 min. How long will they take to complete the job together?

- 1. 26 min 40 sec
- 2. 28 min 20 sec
- 3. 30 min 45 sec
- 4. 32 min 15 sec

Correct Option - 1

Que. 100 Rajesh can walk at 5m/s or cycle at 20 m/s. He takes 45 s to cover a distance of 600 m using a combination of the two modes of transport. How long did Rajesh cycle?

- 1. 15 s
- 2. 20 s
- 3. 25 s
- 4. 26 s

Correct Option - 3

Que. 101 The length, width and height of a room are in the ratio 5 : 4 : 2. If the length is increased by 20% and the width by 25% while the height is reduced by 25%, what will happen to the total area of the four walls of the room?

- 1. Reduce to $\frac{1}{12}$ of the initial area
- 2. Increase by $\frac{1}{5}$ of the initial area
- 3. Increase to $\frac{1}{12}$ of the initial area
- 4. Reduce by $\frac{1}{5}$ of the initial area

Correct Option - 1

Que. 102 Tuhin and Pranab can individual complete a job in 42 minutes and 70 minutes respectively. Starting with Tuhin the work alternately for a minute each work is completed only the one working at the end allowed to work for less than a minute in his final turn. How long will it take the due to complete the work?

- 1. 53 min
- 2. 52 min 24 s
- 3. 52 min 30 s
- 4. 52 min 40 s

Correct Option - 2

Que. 103 Ravinder leaves home every day at 8 am and reaches office at 9 : 30 am. One day he left his home at 8 am but travelled one third of the distance at $\frac{3}{4}$ of the usual speed. At how many times his normal speed did Ravinder travel at the remaining part of the journey if he managed to reach office on time?

- 1. $\frac{4}{3}$
- 2. $\frac{5}{4}$
- 3. $\frac{6}{5}$
- 4. $\frac{3}{2}$

Correct Option - 3

Que. 104 Which of the following pairs most closely matches the relationship between the words above?
GHEE : VANASPATI

1. Milk : Water
2. Milk : Tea
3. Milk : Curd
4. Milk : Cheese

Correct Option - 1

Que. 105 'VIRTUE' is related to 'VICE' in the same way as 'SYMPATHY' is related to ____.

1. Sorrow
2. Cruelty
3. Kindness
4. Emotion

Correct Option - 2

Que. 106 Which of the following pairs most closely matches the relationship between the words above
GHAZAL : POEM

1. Lie : Falsehood
2. Chapter : Book
3. Legend : Story
4. Teacher : College

Correct Option - 1

Que. 107 'BEHK' is related to 'DGJM' in the same way as 'NQTW' is related to ____.

1. PRTV
2. ORTU
3. PSVY
4. PRUX

Correct Option - 3

Que. 108 Select the alternative that is related to the third term in the same way as the second term is related to the first term.

Axe : Woodcutter :: Needle : ?

1. Butcher
2. Carpenter
3. Tailor
4. Painter

Correct Option - 3

Que. 109 Which of the following pairs is opposite to the relationship between the words above?
Hatred : Love

1. Virtue : Vice
2. Like : Dislike
3. Friend : Enemy
4. Safe : Secure

Correct Option - 4

Que. 110 | Select the alternative that is related to the third term in the same way as the second term is related to the first term.

Doctor : Patients : : Teacher : ?

- 1. Children
- 2. Students
- 3. School
- 4. Classroom

Correct Option - 2

Que. 111 | What will be written in place of the question mark in the given series.

A 1 Y 2 5 C 3 G 7 W 2 3 O ??

- 1. 20
- 2. 16
- 3. 15
- 4. 18

Correct Option - 3

Que. 112 | How many T's are both immediately preceded and followed by 'E' in the following series?

E T E T T M E E E T E T E T E T T E E T T T E E E T E T E T E T T E E T E

- 1. 7
- 2. 6
- 3. 5
- 4. 8

Correct Option - 4

Que. 113 | What will be written in place of the question mark in the given series?

8 H 2 4 X 7 G 1 5 O 1 7 ?

- 1. T
- 2. R
- 3. Q
- 4. P

Correct Option - 3

Que. 114 | Pointing to a photograph Savita says, "He is the son of the only son of my grandfather. How is the man in the photograph related to Savita?

- 1. Brother
- 2. Father
- 3. Son
- 4. Uncle

Correct Option - 1

Que. 115 | Pointing to a woman Gita said, "She is the daughter of the only child of my grandmother." How is the woman related to Gita?

- 1. Niece
- 2. Cousin

- 3. Sister
- 4. Mother

Correct Option - 3

Que. 116 What will be the next figure in the given series?



- 1.
- 2.
- 3.
- 4.

Correct Option - 1





Que. 117 Find the odd figure out:

- 1.
- 2.
- 3.
- 4.

Correct Option - 4





Que. 118 Choose the Venn diagram below best illustrates the relationship among the three classes given below.

Birds, Fish, Chicken.

1. 
2. 
3. 
4. 


Correct Option - 1

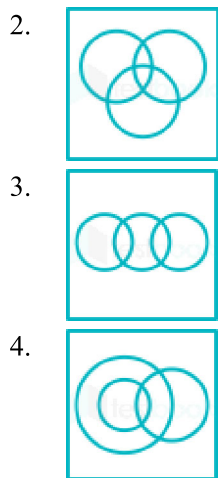
Que. 119 Choose the Venn diagram below best illustrates the relationship among the three classes given below.
Sports, Football, Lizard

1. 
2. 
3. 
4. 

Correct Option - 1

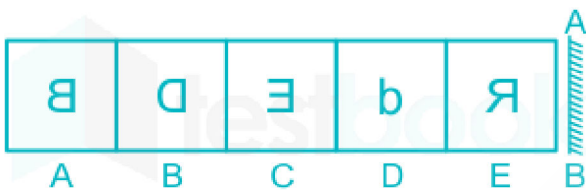
Que. 120 Choose the Venn diagram below best illustrates the relationship among the three classes given below.
Pen, Pencil, Paper.

1. 



Correct Option - 1

Que. 121 Identify the odd man out in the figures (A) to (E) when the mirror is held at AB.



1. A
2. B
3. C
4. D

Correct Option - 4

Que. 122 The two words in the word pair given below are related in a certain way:
Exercise : Fitness

Find the pair in the sets below which has the same relationship as the original

1. Rain : Crops
2. Practice : Perfection
3. Sacrifice : Recognition
4. Wealth : Happiness

Correct Option - 2

Que. 123 The triplet most similar to (3, 16, 125) is:

1. (2, 8, 81)
2. (5, 36, 343)
3. (6, 36, 144)
4. (7, 64, 256)

Correct Option - 2

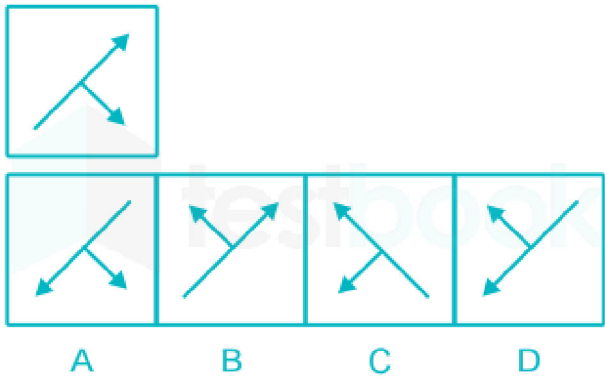
Que. 124 Find the odd pair out from among the following pairs?

1. Company : Employees
2. Team : Players
3. Ocean : Ships

4. Forest : Trees

Correct Option - 3

Que. 125 Select the correct mirror image of the given combination when the mirror is placed to the right side of it.



- 1. A
- 2. B
- 3. C
- 4. D

Correct Option - 3

Que. 126 Which is the odd one out in this set: Metre, Mile, Furlong, Acre, Yard

- 1. Metre
- 2. Mile
- 3. Furlong
- 4. Acre

Correct Option - 4

Que. 127 Find the odd pair out of the following pairs:

- 1. Social Sciences : Physics
- 2. Mathematics : Algebra
- 3. University : Harvard
- 4. Fruits : Banana

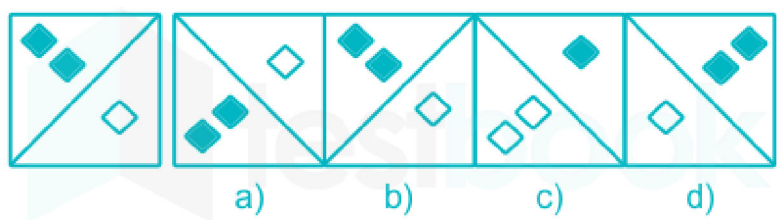
Correct Option - 1

Que. 128 Select the alternative that is related to the third term in the same way as the second term is related to the first term. Wood : Chip : Butter : ?

- 1. Butter
- 2. Crumb
- 3. Slice
- 4. Cake

Correct Option - 3

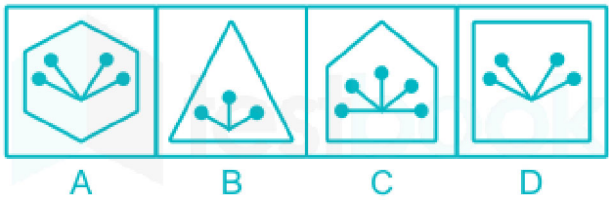
Que. 129 Choose the answer figure which most closely resembles the water image of the question figure.



1. a
2. b
3. c
4. d

Correct Option - 1

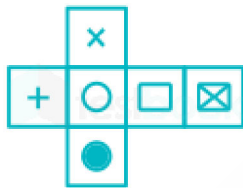
Que. 130 Select the odd figure out of the following figures:



1. A
2. B
3. C
4. D

Correct Option - 1

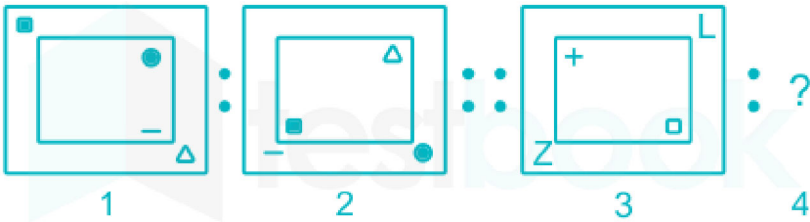
Que. 131 The given figure is folded on the edges to form a cube. Find the option which represents the faces of the cube correctly.



- 1.
- 2.
- 3.
- 4.

Correct Option - 1

Que. 132 Which figure is related to the figure 3 in the same way as figure 2 is related to figure 1?



- 1.
- 2.
- 3.
- 4.

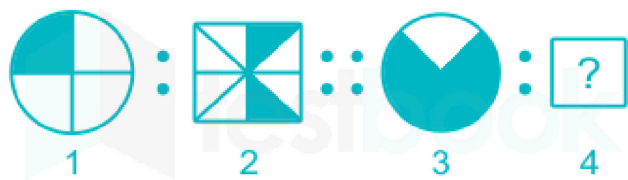
Correct Option - 2

Que. 133 Select the odd figure out:

- 1.
- 2.
- 3.
- 4.

Correct Option - 4

Que. 134 Which figure is related to the figure 3 in the same way as figure 2 is related to figure 1?

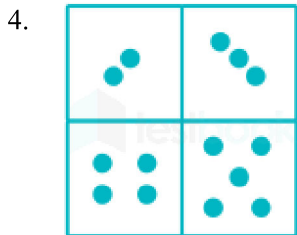


- 1.
- 2.
- 3.
- 4.

Correct Option - 2

Que. 135 Find the odd figure out:

- 1.
- 2.
- 3.



Correct Option - 3

Que. 136 Consider the given two statements to be true even if they seem to be at variance from commonly known facts, decide which of the given conclusions logically and definitely follow(s) from the two given statements.

Statement:

- 1) No window is a fish.
- 2) All fishes are men.

Conclusions:

- 1. No window is a man.
- 2. No man is a window.
- 3. Some men are fishes.
- 4. All men are fishes.

- 1. Only conclusions 2 and 4 follow
- 2. Only conclusions 1 and 3 follow
- 3. Only conclusions 3 follows
- 4. All the four conclusions follow

Correct Option - 3

Que. 137 Consider the given two statements to be true even if they seem to be at variance from commonly known facts, decide which of the given conclusions logically and definitely follow(s) from the two given statements.

Statement:

- 1) Some chalks are dusters.
- 2) All dusters are board.

Conclusions:

- 1. Some chalks are boards.
- 2. No duster is a board.
- 1. Only conclusions 1 follows
- 2. Only conclusions 2 follows
- 3. Neither conclusions 1 nor 2 follows
- 4. Both conclusions 1 nor 2 follow

Correct Option - 1

Que. 138 Consider the following statements to be true, even if they seem to be at variance from commonly known facts, Decide which of the given conclusions logically follow(s) from the statements.

Statements:

- 1) Some desks are caps.
- 2) No cap is black.

Conclusions:

- I) Some caps are desks.
- II) No desk is black.

1. Only conclusion I follows
2. Only conclusion II follows
3. Both, conclusions I and II follow
4. Neither conclusions I nor II follow

Correct Option - 1

Que. 139 Find the missing number: 2, 10, 30, 68, ?

1. 101
2. 102
3. 130
4. 104

Correct Option - 3

Que. 140 Find the missing number in the following number series. 4, 17, 34, 53, 76, ?

1. 105
2. 85
3. 95
4. 103

Correct Option - 1

Que. 141 Select the alternative that is related to the third term in the same way as the second term is related to the first term.

Thermometer : Temperature : : Ammeter : ?

1. Voltmeter
2. Current
3. Mass
4. Energy

Correct Option - 2

Que. 142 Which number follows in the given series? 0, 2, 6, 12, 20, 30, 42, ?

1. 64
2. 50
3. 56
4. 60

Correct Option - 3

Que. 143 Select the alternative that is related to the third term in the same way as the second term is related to the first term.

Doctor : Patient : : Lawyer : ?

1. Judge
2. Court
3. Complainant
4. Barrister

Correct Option - 3

Que. 144 Select the alternative that is related to the third term in the same way as the second term is related to the first term.

226 : 15 :: 65 : ?

- 1. 13
- 2. 4
- 3. 12
- 4. 8

Correct Option - 4

Que. 145 Complete the following number sequence, 2, 5, 10, 17, 26, 37, ?

- 1. 40
- 2. 42
- 3. 49
- 4. 50

Correct Option - 4

Que. 146 If BAN is coded as DCP in a certain code language. How will PAPA be coded as?

- 1. RARA
- 2. CAAA
- 3. ACCC
- 4. RCRC

Correct Option - 4

Que. 147 In a certain code language, FILE is written as 7465 and IDEAL is written as 43586. How will DEAF be written in that code language?

- 1. 1478
- 2. 1588
- 3. 3587
- 4. 1578

Correct Option - 3

Que. 148 If TRUTH is coded as SUQSTVSUGI, then how will LIES be coded?

- 1. KMJHDFTR
- 2. KMHJDFRT
- 3. HJDFRTKM
- 4. KMJHFDTR

Correct Option - 2

Que. 149 In a certain code language, BUTTER is coded as EXWWHU and MILK is coded as PLON. then, in the same code language, how will EARTH be spelled?

- 1. HDWUK
- 2. HDUWK
- 3. KHDUW
- 4. KHUWD

Correct Option - 2

Que. 150 Manmohan is the brother of Praveen. How is Praveen's only sister's mother's mother related to Manmohan?

1. Maternal grandmother
2. Sister
3. Aunt
4. Cousin

Correct Option - 1



Teachingninja.in