



Teachingninja.in



Latest Govt Job updates



Private Job updates



Free Mock tests available



Visit - teachingninja.in

UPPCL
Assistant Accountant
Previous Year Paper
13 Sept 2021



Test Date	13/09/2021
Test Time	9:00 AM - 12:00 PM
Subject	Assistant Accountant

Section : Question related to knowledge of Computers of DOEACC O level

Q.1 In an HTML page, the <a> tag defines a hyperlink, and its _____ attribute specifies the URL of the page the link goes to.

- Ans
- ☒ A. link
 - ☒ B. Href
 - ☒ C. Img
 - ☒ D. path

Question ID : 9277592630
Status : Answered
Chosen Option : B

Q.2 Which of the following is NOT a valid email id?

- Ans
- ☒ A. SUCCESS.INSTITUTTE@GMAIL.COM
 - ☒ B. success@gmail.com
 - ☒ C. success-institute@gmail.com
 - ☒ D. SUCCESS@GMAIL.COM

Question ID : 9277592625
Status : Answered
Chosen Option : C

Q.3 The 'C' language was developed by:

- Ans
- ☒ A. Microsoft
 - ☒ B. Alan Turing
 - ☒ C. Dennis Ritchie
 - ☒ D. Blasé Pascal

Question ID : 9277592634
Status : Answered
Chosen Option : C

Q.4 Which of the following statements related to 'C' language is/are FALSE?
(i) A function must be declared globally in a C program to tell the compiler about the function name, function parameters, and return type.
(ii) The parameter list must not differ in function calling and function declaration.

- Ans ☒ A. Only (ii)
☒ B. Neither (i) nor (ii)
☒ C. Only (i)
☒ D. Both (i) and (ii)

Question ID : 9277592640
Status : Not Answered
Chosen Option : --

Q.5 Which of the following is best suitable to create, edit and save professional documents like letters and reports?

- Ans ☒ A. MS-Word
☒ B. MS-PowerPoint
☒ C. MS-Excel
☒ D. MS-Access

Question ID : 9277592612
Status : Answered
Chosen Option : A

Q.6 Which of the following types of operating systems is non-interactive?

- Ans ☒ A. Multitasking operating system
☒ B. Multi-user operating system
☒ C. Batch processing operating system
☒ D. Multiprogramming operating system

Question ID : 9277592610
Status : Not Answered
Chosen Option : --

Q.7 What is the address of the second cell in an MS-Excel worksheet, considering cell numbering in a row-wise order?

- Ans ☒ A. A1
☒ B. B1
☒ C. A2
☒ D. 1B

Question ID : 9277592616
Status : Answered
Chosen Option : C

Q.8 What is the shortcut key to open the 'Font' dialogue box in MS-Word?

- Ans ☒ A. Alt + F
☒ B. Ctrl + D
☒ C. Alt + Ctrl + D
☒ D. Ctrl + F

Question ID : 9277592614
Status : Not Answered
Chosen Option : --

Q.9 How many bits are there in an IPv4 address?

- Ans ☒ A. 64
☒ B. 128
☒ C. 32
☒ D. 16

Question ID : 9277592622
Status : Answered
Chosen Option : C

Q.10 Which of the given options best describes the truthfulness of the following statements?

- (i) ASP.NET is a web framework designed and developed by Microsoft.
(ii) ASP.NET provides fantastic integration of HTML, CSS and JavaScript.

- Ans ☒ A. (i) - False, (ii) - False
☒ B. (i) - True, (ii) - False
☒ C. (i) - False, (ii) - True
☒ D. (i) - True, (ii) - True

Question ID : 9277592647
Status : Answered
Chosen Option : D

Q.11 Which of the following characters is/are NOT allowed for variable names in 'C'?

- Ans ☒ A. Alphabets
☒ B. White space characters
☒ C. Underscore
☒ D. Digits

Question ID : 9277592636
Status : Answered
Chosen Option : B

Q.12 In C#, a variable name can start with _____ and _____ only.

- Ans ☒ A. digit; white space character
☒ B. alphabet; digit
☒ C. alphabet; underscore
☒ D. underscore; digit

Question ID : 9277592645
Status : Answered
Chosen Option : C

Q.13 क्रोम (Chrome) में इनमें से किस कीबोर्ड शॉर्टकट (keyboard shortcut) का उपयोग क्रोम इन्कोग्निटो मोड (Incognito mode) में नया विंडो खोलने के लिए किया जाता है?

- Ans ☒ A. Ctrl + N
☒ B. Ctrl + Shift + C
☒ C. Ctrl + C
☒ D. Ctrl + Shift + N

Question ID : 9277592627
Status : Answered
Chosen Option : D

Q.14 Which of the following can be used to reload the current page, ignoring cached content in Chrome?

- Ans ☒ A. F5
☒ B. Shift + F3
☒ C. Shift + F6
☒ D. Shift + F5

Question ID : 9277592628
Status : Answered
Chosen Option : A

Q.15 The lifetime (longevity) of the static variables in a 'C' program is:

- Ans ☒ A. till the end of the first function
☒ B. till the end of the main program
☒ C. till the time first ten statements get executed
☒ D. within the function in which they are defined

Question ID : 9277592642
Status : Answered
Chosen Option : B

Q.16 The CPU clock speed refers to the number of:

- Ans ☒ A. CPUs it can have
☒ B. RAMs it can have
☒ C. clocks it can have
☒ D. Number of cycles CPU executes per second

Question ID : 9277592607
Status : Answered
Chosen Option : D

Q.17 If X, Y, and Z are pointer variables of type char, int, and float, respectively, in 'C' language, then which of the following statements is true?

- Ans ☒ A. Size of X, Y, and Z are same
☒ B. Size of Z is greater than the size of X
☒ C. Size of Y is greater than the size of X
☒ D. Size of Z is greater than the size of Y

Question ID : 9277592641
Status : Answered
Chosen Option : B

Q.18 Internet is the best example of:

- Ans ☒ A. WAN
☒ B. MAN
☒ C. VLAN
☒ D. LAN

Question ID : 9277592621
Status : Answered
Chosen Option : A

Q.19 .NET फ्रेमवर्क _____ द्वारा डिजाइन और विकसित किया गया था।

Ans ☒ A. माइक्रोसॉफ्ट (Microsoft)

☒ B. IBM

☒ C. ओरेकल (Oracle)

☒ D. गूगल (Google)

Question ID : 9277592644

Status : Answered

Chosen Option : A

Q.20 Operating System is one of the best examples of:

Ans ☒ A. system software

☒ B. application software

☒ C. firmware

☒ D. adware

Question ID : 9277592609

Status : Answered

Chosen Option : A

Q.21 Which of the following represents a step-by-step process to solve a computational problem?

Ans ☒ A. Number system

☒ B. Algorithm

☒ C. Function

☒ D. Routine

Question ID : 9277592633

Status : Answered

Chosen Option : B

Q.22 Which of the following fields CANNOT be left blank while sending an email?

Ans ☒ A. Subject

☒ B. To

☒ C. Cc

☒ D. Bcc

Question ID : 9277592626

Status : Answered

Chosen Option : B

Q.23 C' लैंग्वेज से संबंधित निम्न में से कौन-सा कथन सत्य है?

(i) स्ट्रक्चर, उपयोगकर्ता-परिभाषित डेटा प्रकार है, जो हमें विभिन्न डेटा प्रकारों के संग्रह को संग्रहीत करने में सक्षम बनाता है।

(ii) 'struct' और 'union' दोनों ही कीवर्ड हैं और इनका उपयोग क्रमशः स्ट्रक्चर और यूनियन को परिभाषित करने के लिए किया जाता है।

Ans ☒ A. केवल (i)

☒ B. न तो (i) न ही (ii)

☒ C. केवल (ii)

☒ D. (i) और (ii) दोनों

Question ID : 9277592643

Status : Answered

Chosen Option : D

Q.24 With respect to multimedia, the term SNR stands for:

- Ans ☐ A. Signal with Noise Rate
☐ B. Signal to Noise Rate
☐ C. Signal and Noise Rate
☒ D. Signal to Noise Ratio

Question ID : 9277592649
Status : Not Answered
Chosen Option : --

Q.25 What is the full-form of TCP?

- Ans ☐ A. Transistor Control Protocol
☒ B. Transmission Control Protocol
☐ C. Technically Correct Protocol
☐ D. Tele-Communication Protocol

Question ID : 9277592623
Status : Answered
Chosen Option : B

Q.26 Which of the following is used with the tag as an attribute to specify an alternate text for an image, if the image for some reason cannot be displayed?

- Ans ☐ A. auxiliary
☐ B. duplicate
☒ C. alt
☐ D. alternate

Question ID : 9277592632
Status : Not Answered
Chosen Option : --

Q.27 With respect to multimedia, sampling rate is the number of times the analog sound is taken per:

- Ans ☐ A. month
☒ B. second
☐ C. hour
☐ D. minute

Question ID : 9277592650
Status : Answered
Chosen Option : B

Q.28 Which of the following symbols is used to enter formula in an MS-Excel cell?

- Ans ☐ A. \$
☐ B. +
☐ C. #
☒ D. =

Question ID : 9277592615
Status : Answered
Chosen Option : D

Q.29 Which of the following category of ports is generally used to connect a monitor to a computer's video card?

- Ans ☒ A. Serial port
☒ B. VGA port
☒ C. Parallel port
☒ D. PS/2 port

Question ID : 9277592653
Status : Not Answered
Chosen Option : --

Q.30 When you create first presentation file in MS-PowerPoint, what will be the default file name?

- Ans ☒ A. Powerpoint1
☒ B. Slide1
☒ C. Presentation1
☒ D. Presentation

Question ID : 9277592618
Status : Answered
Chosen Option : C

Q.31 In MS-Word, if Microsoft Office Button exists, then it is located on the _____ corner of the window.

- Ans ☒ A. top-left
☒ B. bottom-right
☒ C. bottom-left
☒ D. top-right

Question ID : 9277592613
Status : Answered
Chosen Option : A

Q.32 In C#, there are _____ relational operators and _____ logical operators.

- Ans ☒ A. 4; 3
☒ B. 6; 3
☒ C. 3; 6
☒ D. 5; 6

Question ID : 9277592646
Status : Not Answered
Chosen Option : --

Q.33 Which of the following is a valid keyword in 'C' language?

- Ans ☒ A. Floating
☒ B. Enumeration
☒ C. Integer
☒ D. Void

Question ID : 9277592635
Status : Answered
Chosen Option : B

Q.34 NIC, एक हार्डवेयर घटक है, जिसका उपयोग किसी नेटवर्क में किसी एक कंप्यूटर को दूसरे कंप्यूटर से जोड़ने के लिए किया जाता है। NIC पद का क्या अर्थ है?

- Ans
- ☐ A. न्यू इंटरफ़ेस कार्ड (New Interface Card)
 - ☐ B. नेटवर्क इंटरफ़ेस केयर (Network Interface Care)
 - ☒ C. नेटवर्क इंटरफ़ेस कार्ड (Network Interface Card)
 - ☐ D. नेटवर्क इंटीग्रेशन कार्ड (Network Integration Card)

Question ID : 9277592654
Status : Answered
Chosen Option : C

Q.35 With respect to operating systems, which of the following is NOT a valid process state?

- Ans
- ☐ A. Ready
 - ☐ B. Waiting
 - ☐ C. Running
 - ☒ D. Starving

Question ID : 9277592611
Status : Answered
Chosen Option : D

Q.36 Which of the following are used for combining different kinds of media formats and deliver them as multimedia contents?

- Ans
- ☒ A. Multimedia authoring tools
 - ☐ B. Device drivers
 - ☐ C. Scanners
 - ☐ D. Media players

Question ID : 9277592648
Status : Answered
Chosen Option : A

Q.37 How many layers are there in a TCP/IP network?

- Ans
- ☐ A. 6
 - ☐ B. 3
 - ☒ C. 5
 - ☐ D. 7

Question ID : 9277592624
Status : Answered
Chosen Option : B

Q.38 The _____ element is the root element of an HTML page.

- Ans
- ☐ A. <head>
 - ☐ B. <body>
 - ☒ C. <html>
 - ☐ D. <title>

Question ID : 9277592629
Status : Answered
Chosen Option : C

Q.39 Which of the following provides the slot to connect graphics cards?

- Ans ☒ A. RAM slot
☒ B. AGP slot
☒ C. USB port
☒ D. PCI slot

Question ID : 9277592608
Status : Not Answered
Chosen Option : --

Q.40 In an HTML page, the tag is used to embed an image, and its _____ attribute specifies the path of the image to be displayed.

- Ans ☒ A. src
☒ B. path
☒ C. source
☒ D. root

Question ID : 9277592631
Status : Answered
Chosen Option : A

Q.41 What is the value of the following MS-Excel function?
=FLOOR(14, 4)

- Ans ☒ A. 10
☒ B. 13
☒ C. 14
☒ D. 12

Question ID : 9277592617
Status : Not Answered
Chosen Option : --

Q.42 If integer requires two bytes space, then what will be the size of the following 'C' array?
int array[3][4]={0};

- Ans ☒ A. 24 bytes
☒ B. 12 bytes
☒ C. 7 bytes
☒ D. 14 bytes

Question ID : 9277592638
Status : Answered
Chosen Option : A

Q.43 A _____ is a hardware device which is used to receive, analyse and forward the incoming packets to another network.

- Ans ☒ A. modem
☒ B. router
☒ C. repeater
☒ D. USB

Question ID : 9277592655
Status : Answered
Chosen Option : B

Q.44 Which of the following is a part of the CPU of a computer?

Ans ☒ A. Motherboard

☒ B. ALU

☒ C. SRAM

☒ D. DRAM

Question ID : 9277592606

Status : Answered

Chosen Option : B

Q.45 Which of the given options best describes the truthfulness of the following statements?

(i) In 1-bit images, each pixel is stored as a single byte.

(ii) A 1-bit image with resolution 640x480 needs a storage space of 640+480 bits.

Ans ☒ A. (i) - False, (ii) - True

☒ B. (i) - True, (ii) - False

☒ C. (i) - True, (ii) - True

☒ D. (i) - False, (ii) - False

Question ID : 9277592651

Status : Not Answered

Chosen Option : --

Q.46 Consider the following array declaration in 'C' language:

```
int array[] = {2, 3, 4, 5};
```

What will be the output of the following statement?

```
printf("%d", 2[array]);
```

Ans ☒ A. 4

☒ B. 3

☒ C. 2

☒ D. 5

Question ID : 9277592639

Status : Answered

Chosen Option : A

Q.47 What is the keyboard shortcut to perform 'Redo' operation in MS-PowerPoint?

Ans ☒ A. Ctrl + R

☒ B. Ctrl + Z

☒ C. Ctrl + Y

☒ D. Alt + R

Question ID : 9277592619

Status : Answered

Chosen Option : C

Q.48 What is the size of the following array declaration in 'C', if character requires one-byte memory space?
char name[]="abcde";

- Ans ☒ A. 4 bytes
☒ B. 6 bytes
☒ C. 7 bytes
☒ D. 5 bytes

Question ID : 9277592637
Status : Answered
Chosen Option : D

Q.49 What is the full form of SQL?

- Ans ☒ A. Simple Query Language
☒ B. Structured Queuing Language
☒ C. Structured Query Language
☒ D. Structured Queuing Lexicon

Question ID : 9277592620
Status : Answered
Chosen Option : C

Q.50 What does the term USB stand for?

- Ans ☒ A. Unique Service Business
☒ B. Unique Service Bus
☒ C. Universal Serial Bus
☒ D. Universal Service Bus

Question ID : 9277592652
Status : Answered
Chosen Option : C

Section : Arithmetic

Q.1 कोई दो अंकों वाली संख्या अंकों के योगफल के 3 गुने से 4 अधिक है। अंकों को उलट कर बनाई गई संख्या अंकों के योगफल के 7 गुने से 3 अधिक है। अंकों का अंतर ज्ञात करें।

- Ans ☒ A. 3
☒ B. 5
☒ C. 2
☒ D. 7

Question ID : 9277592669
Status : Answered
Chosen Option : C

Q.2 किसी व्यक्ति को ₹4,760 में साईकल बेचकर 15 प्रतिशत की हानि होती है। यदि वह इस साईकल को ₹5,880 में बेचता, तो उसे होने वाला लाभ या हानि प्रतिशत ज्ञात करें।

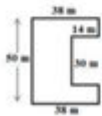
- Ans ☒ A. 5 प्रतिशत हानि
☒ B. 4 प्रतिशत लाभ
☒ C. 5 प्रतिशत लाभ
☒ D. 4 प्रतिशत हानि

Question ID : 9277592661

Status : Answered

Chosen Option : C

Q.3 किसी मैदान में 3.5 kg प्रति $100 m^2$ मात्रा की दर से यूरिया का छिड़काव करना है। मैदान का आयाम आकृति में दर्शाए अनुसार है और सभी कोण समकोण हैं। आवश्यक यूरिया की मात्रा ज्ञात करें।



- Ans ☒ A. 665 kg
☒ B. 518 kg
☒ C. 66.5 kg
☒ D. 51.8 kg

Question ID : 9277592667

Status : Not Answered

Chosen Option : --

Q.4 ABCD, समचतुर्भुज है। बिंदु E और F, भुजा BC और CD पर इस प्रकार हैं कि CE = CF है। यदि $\angle DAF = 40^\circ$ है, तो $\angle EAB$ ज्ञात करें।

- Ans ☒ A. 60 डिग्री
☒ B. 50 डिग्री
☒ C. 45 डिग्री
☒ D. 40 डिग्री

Question ID : 9277592672

Status : Answered

Chosen Option : B

Q.5 यदि $\tan 3x = \frac{4 \sin^2 30^\circ \sin 60^\circ}{\sin 45^\circ \cos 45^\circ}$ है, जहां x न्यून कोण है, तो x का माप ज्ञात करें।

- Ans ☒ A. 60 डिग्री
☒ B. 15 डिग्री
☒ C. 10 डिग्री
☒ D. 20 डिग्री

Question ID : 9277592675

Status : Not Answered

Chosen Option : --

Q.6 निम्न को सरल करें।

$$2\frac{3}{4} + 3\frac{1}{2} - 2\frac{1}{3} + \frac{5}{6}$$

Ans

✓ A. $4\frac{3}{4}$

✗ B. $3\frac{3}{4}$

✗ C. $3\frac{8}{9}$

✗ D. $7\frac{2}{3}$

Question ID : 9277592657

Status : Not Answered

Chosen Option : --

Q.7 किसी छात्रावास में, 280 छात्रों हेतु 100 दिन के लिए भोजन का प्रावधान है। 10 दिन बाद, 80 छात्रों ने छात्रावास छोड़ दिया। शेष भोजन कितने दिनों के लिए पर्याप्त होगा?

Ans ✗ A. 110

✗ B. 90

✗ C. $64\frac{2}{7}$

✓ D. 126

Question ID : 9277592663

Status : Answered

Chosen Option : C

Q.8 पांच वर्ष पहले, किसी पिता की आयु उसके बेटे की आयु से 7 गुना अधिक थी। पांच वर्ष बाद, पिता की आयु उसके बेटे की आयु से 3 गुना अधिक होगी। कितने वर्ष बाद, पिता की आयु और बेटे की आयु का अनुपात 11: 5 होगा?

Ans ✗ A. 20 वर्ष

✗ B. 16 वर्ष

✓ C. 15 वर्ष

✗ D. 18 वर्ष

Question ID : 9277592670

Status : Answered

Chosen Option : C

Q.9 PA और PB, बाह्य बिंदु P से O केंद्र वाले वृत्त की स्पर्शरेखाएं हैं। यदि वृत्त की त्रिज्या 5 cm है और PA, PB से संबन्धित है, तो जीवा AB की लंबाई ज्ञात करें।

Ans ✓ A. $5\sqrt{2}$ cm

✗ B. 6 cm

✗ C. 5 cm

✗ D. $5\sqrt{3}$ cm

Question ID : 9277592671

Status : Answered

Chosen Option : B

Q.10 $\triangle ABC$ में, $\angle ABC = 90^\circ$, $\angle ACB = 60^\circ$ और $AB = 3 \text{ cm}$ है। $BC+AC$ का मान ज्ञात करें।

- Ans
- ☒ A. $3\sqrt{3}$
 - ☐ B. $\sqrt{3}$
 - ☐ C. 36
 - ☐ D. $\sqrt[3]{3}$

Question ID : 9277592676
Status : Answered
Chosen Option : B

Q.11 यदि $2\sin\theta = \operatorname{cosec}\theta$, $0 < \theta \leq 90^\circ$ है, तो θ का माप ज्ञात करें।

- Ans
- ☐ A. 30 डिग्री
 - ☐ B. 90 डिग्री
 - ☒ C. 45 डिग्री
 - ☐ D. 60 डिग्री

Question ID : 9277592674
Status : Not Answered
Chosen Option : --

Q.12 10 संख्याओं का औसत 42 है, जबकि इनमें से आठ संख्याओं का औसत 45 है। यदि शेष दो संख्याओं का मान बराबर है, तो दोनों संख्याएं ज्ञात करें।

- Ans
- ☐ A. 45
 - ☐ B. 48
 - ☐ C. 22
 - ☒ D. 30

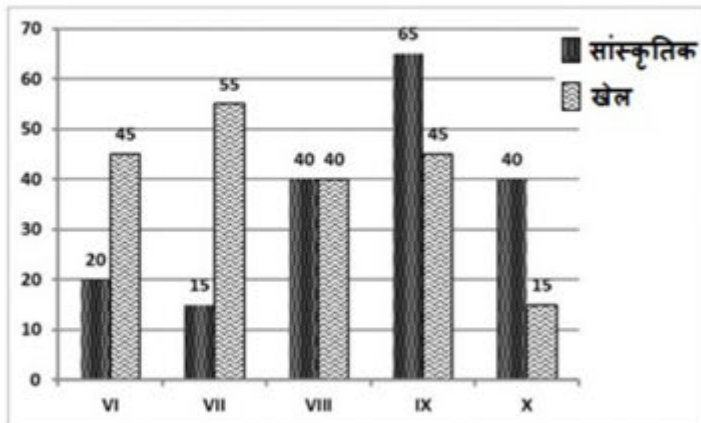
Question ID : 9277592660
Status : Answered
Chosen Option : D

Q.13 k के कौन-से अधिकतम मान के लिए संख्या 7316k24 से 6 विभाज्य है?

- Ans
- ☒ A. 7
 - ☐ B. 8
 - ☐ C. 1
 - ☐ D. 9

Question ID : 9277592659
Status : Answered
Chosen Option : D

Q.14 बार ग्राफ किसी विद्यालय के उन छात्रों की संख्या को दर्शाता है जिन्होंने वर्ष 2018 में सांस्कृतिक गतिविधियों और खेलों में भाग लिया था। सांस्कृतिक गतिविधियों और खेलों में भाग लेने वाले छात्रों की संख्या का अनुपात ज्ञात करें।



- Ans
- ☐ A. 6 : 7
 - ☐ B. 1 : 1
 - ☒ C. 9 : 10
 - ☐ D. 9 : 19

Question ID : 9277592678
Status : Answered
Chosen Option : A

Q.15 यदि $4 + x^2 = 4x$ है, तो $(1 - x)^4$ का मान ज्ञात करें।

- Ans
- ☐ A. -1
 - ☐ B. 81
 - ☐ C. 0
 - ☒ D. 1

Question ID : 9277592668
Status : Answered
Chosen Option : D

Q.16 दो संख्याओं का लघुतम समापवर्त्य (LCM) और महत्तम समापवर्तक (HCF) क्रमशः 1748 और 4 हैं। यदि इनमें से एक संख्या 76 है, तो दोनों संख्याओं का योगफल ज्ञात करें।

- Ans
- ☐ A. 152
 - ☐ B. 156
 - ☒ C. 168
 - ☐ D. 80

Question ID : 9277592658
Status : Answered
Chosen Option : C

Q.17 कबीर अपने घर से 300 km की दूरी तय करता है, वह दूरी का कुछ भाग रेलगाड़ी और कुछ भाग बस द्वारा तय करता है। यदि वह बस से 60 km की दूरी और रेलगाड़ी से शेष दूरी तय करता है तो उसे 4 घंटा लगता है। यदि वह बस से 100 km की दूरी और रेलगाड़ी से शेष दूरी तय करता है, तो उसे 10 मिनट अधिक लगता है। km/h में रेलगाड़ी की चाल ज्ञात करें।

- Ans ☒ A. 75
☒ B. 60
☒ C. 80
☒ D. 100

Question ID : 9277592664
 Status : Answered
 Chosen Option : B

Q.18

किसी टेलीफोन निर्देशिका से लिए गए 50 नाम और 50 उपनाम वाले अक्षरों की संख्या की बारंबारताएं तालिका में दी गई हैं। 13 से कम अक्षरों वाले नामों की संख्या और 10 से कम अक्षरों वाले उपनामों की संख्या के बीच अंतर ज्ञात करें।

अक्षरों की संख्या	नामों की संख्या	उपनामों की संख्या
1-4	5	0
4-7	16	9
7-10	18	19
10-13	8	18
13-17	3	4

- Ans ☒ A. 1
☒ B. 4
☒ C. 3
☒ D. 19

Question ID : 9277592680
 Status : Answered
 Chosen Option : D

Q.19 ABCD एक चतुर्भुज है, जिसमें AB, CD के समानांतर हैं। विकर्ण AC और BD, P पर प्रतिच्छेदित करते हैं। यदि $AP = k + 1$, $BP = k + 3$, $CP = k - 2$ और $DP = k - 1$ है, तो k का मान ज्ञात करें।

- Ans ☒ A. 6
☒ B. 5
☒ C. 4
☒ D. 7

Question ID : 9277592673
 Status : Answered
 Chosen Option : C

Q.20 स्थान A और B एक दूसरे से 96 km की दूरी पर स्थित हैं। स्थान A से कोई कार और स्थान B से कोई दोपहिया एक साथ चलना शुरू करते हैं। यदि कार और दोपहिया भिन्न-भिन्न चाल से समान दिशा में चलते हैं, तो वे छह घंटे में मिलते हैं। यदि वे एक दूसरे की ओर चलते हैं, तो वे डेढ़ घंटे में मिलते हैं। km/h में कार की चाल ज्ञात करें।

- Ans ☒ A. 32
☒ B. 36
☒ C. 24
☒ D. 40

Question ID : 9277592665
 Status : Answered
 Chosen Option : B

Q.21 ब्याज की गणना अर्द्ध-वार्षिक चक्रवृद्धि आधार पर करते हुए, चक्रवृद्धि ब्याज पर उधार दी गई कोई धनराशि एक वर्ष में ₹75,625 और दो वर्ष में ₹94,864 हो जाती है। प्रति वर्ष ब्याज दर ज्ञात करें।

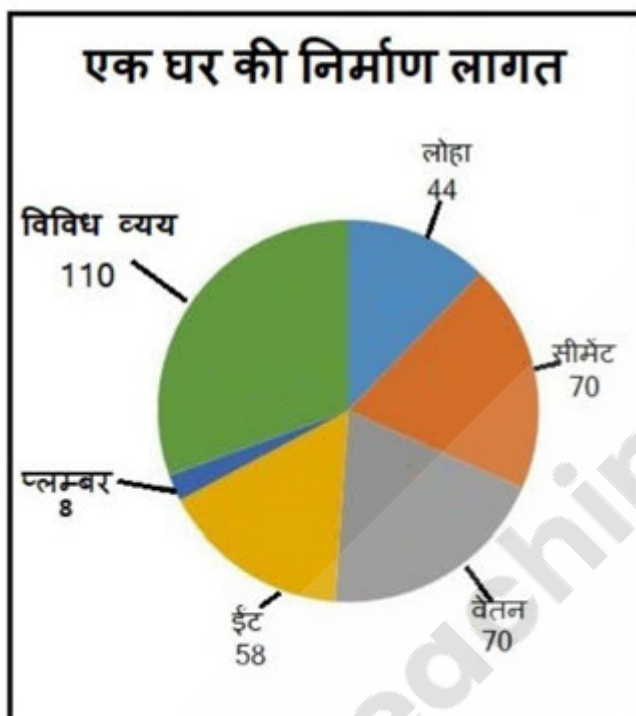
- Ans
- ☒ A. 12 प्रतिशत
 - ☒ B. 6 प्रतिशत
 - ☒ C. 24 प्रतिशत
 - ☒ D. 18 प्रतिशत

Question ID : 9277592662

Status : Not Answered

Chosen Option : --

Q.22 पाई-चार्ट में, किसी घर के निर्माण लागत को (डिग्री में) दर्शाया गया है। लोहे पर खर्च होने वाली राशि के सापेक्ष ईंटों पर अधिक व्यय ज्ञात करें, जब निर्माण की कुल लागत ₹2,70,000 है।



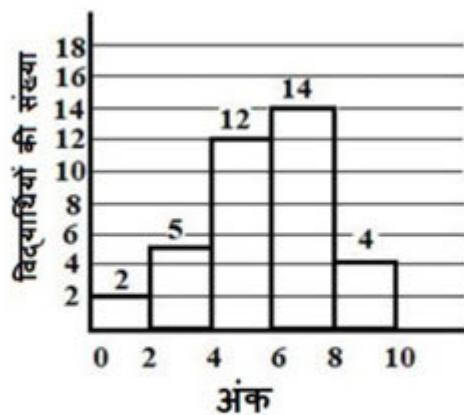
- Ans
- ☒ A. ₹10,500
 - ☒ B. ₹9,000
 - ☒ C. ₹37,500
 - ☒ D. ₹7,650

Question ID : 9277592677

Status : Answered

Chosen Option : C

Q.23 निम्न हिस्टोग्राम में, 10 अंकों वाली किसी परीक्षा में 37 छात्रों द्वारा प्राप्त अंक दर्शाए गए हैं। कितने छात्रों को 6 से कम अंक प्राप्त हुए हैं?

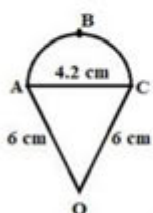


- Ans
- ☐ A. 17
 - ☐ B. 33
 - ☐ C. 20
 - ☒ D. 19

Question ID : 9277592679
Status : Answered
Chosen Option : D

Q.24 दी गई आकृति में, OABCO का परिमाण ज्ञात करें, जहां चाप ABC, AC व्यास वाला अर्ध-वृत्त है।

$$\pi = \frac{22}{7} \text{ ले ?}$$



- Ans
- ☐ A. 16.2 cm
 - ☐ B. 25.2 cm
 - ☒ C. 18.6 cm
 - ☐ D. 22.8 cm

Question ID : 9277592666
Status : Answered
Chosen Option : C

Q.25 निम्न व्यंजक को सरल करें।

$$\left(\frac{4^{-2} \times 3^2}{4 \times 3^{-4}}\right)^{\frac{1}{3}} \times \frac{4^{-3} \times 3^3}{4^{-4} \times 3^6}$$

Ans

☒ A. $\frac{1}{9}$

☒ B. $\frac{1}{12}$

☒ C. $\frac{1}{3}$

☒ D. $\frac{27}{16}$

Question ID : 9277592656
Status : Answered
Chosen Option : C

Section : General English and General Hindi

Q.1 Parts of the following sentence are given as options. Identify the part that contains a grammatical error.

Last week, a thick toxic haze is enveloping Delhi and much of north India.

Ans

☒ A. Last week

☒ B. a thick toxic haze

☒ C. and much of north India

☒ D. is enveloping Delhi

Question ID : 9277592681
Status : Answered
Chosen Option : C

Q.2 Select the correct indirect form of the given sentence.

My sister said, "I can't find the book you told me about."

Ans

☒ A. My sister said that you can't find the book I told you about.

☒ B. My sister said that I can't find the book you told me about.

☒ C. My sister said that she couldn't find the book you had told her about.

☒ D. My sister said that she couldn't find the book I had told her about.

Question ID : 9277592686
Status : Answered
Chosen Option : D

Q.3 Select the most appropriate synonym of the given word.
CALLOUS

- Ans ☒ A. indistinct
☒ B. insensitive
☒ C. interested
☒ D. inferior

Question ID : 9277592694
Status : Answered
Chosen Option : C

Q.4 Parts of the following sentence are given as options. Identify the part that contains a grammatical error.

Mangalore in Karnataka is at a highest risk of flooding, than the coastal cities such as Mumbai and New York, from rising sea levels because of melting glaciers

- Ans ☒ A. Mangalore in Karnataka is at a highest risk of flooding
☒ B. than the coastal cities such as Mumbai and New York,
☒ C. from rising sea levels
☒ D. because of melting glaciers

Question ID : 9277592682
Status : Not Answered
Chosen Option : --

Q.5 Select the most appropriate option to fill in the blank.

The truck driver _____ his knee on the dashboard in the collision on the Expressway due to poor visibility yesterday.

- Ans ☒ A. banging
☒ B. banged
☒ C. bangs
☒ D. is banging

Question ID : 9277592689
Status : Answered
Chosen Option : D

Q.6 Select the correct direct form of the given sentence.

The teacher told us that the school was going to take us on a camping holiday in the mountains for a week.

- Ans ☒ A. The teacher said to us, "The school will be taking us on a camping holiday in the mountains for a week."
☒ B. The teacher said to us, "The school is taking you on a camping holiday in the mountains for a week."
☒ C. The teacher said to us, "The school was going to take us on a camping holiday in the mountains for a week."
☒ D. The teacher said to us, "The school is going to take you on a camping holiday in the mountains for a week."

Question ID : 9277592687
Status : Answered
Chosen Option : D

Q.7 Select the most appropriate ANTONYM of the given word.
LANGUID

- Ans ☒ A. sluggish
☒ B. apathetic
☒ C. energetic
☒ D. leisurely

Question ID : 9277592698
Status : Answered
Chosen Option : B

Q.8 Select the most appropriate ANTONYM of the given word.
RECKLESS

- Ans ☒ A. daring
☒ B. carefree
☒ C. brash
☒ D. cautious

Question ID : 9277592697
Status : Answered
Chosen Option : D

Q.9 Select the most appropriate synonym of the given word.
DELICATE

- Ans ☒ A. tough
☒ B. ordinary
☒ C. fragile
☒ D. firm

Question ID : 9277592693
Status : Not Answered
Chosen Option : --

Q.10 Select the most appropriate meaning of the given idiom.
To hit below the belt

- Ans ☒ A. To go to sleep
☒ B. To take off your belt
☒ C. To strike unfairly
☒ D. To disturb others

Question ID : 9277592701
Status : Answered
Chosen Option : C

Q.11 Given here are four jumbled sentences. Select the option that gives their correct order.

- A. Anak Krakatau is a volcano in Indonesia which erupted and caused an underwater landslide.
- B. At least 420 people died, 1,400 people were injured and over 900 homes were destroyed.
- C. The volcano is highly active – there could be more tsunamis.
- D. It caused a tsunami on Saturday, 22nd December 2018.

Ans ☒ A. ADBC
☒ B. CBAD
☒ C. DBCA
☒ D. ACBD

Question ID : 9277592691
Status : Not Answered
Chosen Option : --

Q.12 Select the most appropriate ANTONYM of the given word.
DISTINCT

Ans ☒ A. marked
☒ B. prescribed
☒ C. noticeable
☒ D. vague

Question ID : 9277592696
Status : Answered
Chosen Option : C

Q.13 Select the most appropriate option to fill in the blank.

The best way to savour the beauty of the valley is _____ the view point made especially for the purpose.

Ans ☒ A. on
☒ B. from
☒ C. beside
☒ D. at

Question ID : 9277592688
Status : Answered
Chosen Option : A

Q.14 Given here are six sentences. S1 and S6 are the first and the last sentences. The rest of the sentences, namely A, B, C and D, are jumbled. Select the option that gives their correct order.

S1. Wharton left America for the continent shortly after his first child was born.

A. It is a choice he does not regret even though he and his family do miss America.

B. He chose the latter.

C. The choice between an academic career and life among the artists in Paris was a difficult one.

D. His painter's income did not allow frequent trips to America.

S6. But of late the family has been able to return once or twice every year.

Ans ☒ A. CBAD

☒ B. CABD

☒ C. ABCD

☒ D. ADCB

Question ID : 9277592692

Status : Answered

Chosen Option : B

Q.15 Select the most appropriate synonym of the given word.
RELINQUISH

Ans ☒ A. abandon

☒ B. keep

☒ C. claim

☒ D. hold

Question ID : 9277592695

Status : Answered

Chosen Option : C

Q.16 Fill in the blank with the most appropriate phrase.
I ____ all the instructions; still she was not happy.

Ans ☒ A. carried away

☒ B. carried off

☒ C. carried on

☒ D. carried out

Question ID : 9277592699

Status : Answered

Chosen Option : A

Q.17 Fill in the blank with the most appropriate phrase.
Please ____ for a moment, father is coming.

Ans ☒ A. hold back

☒ B. hold up

☒ C. hold on

☒ D. hold out

Question ID : 9277592700

Status : Answered

Chosen Option : C

Q.18 Select the most appropriate option to fill in the blank.

The interviews have been going on _____ 10 o'clock in the morning.

- Ans ☒ A. from
☒ B. since
☒ C. for
☒ D. until

Question ID : 9277592690
Status : Answered
Chosen Option : A

Q.19 Select the correct active form of the given sentence.

The food can now be removed from the table.

- Ans ☒ A. We have now removed the food from the table.
☒ B. We could now remove the food from the table.
☒ C. We are now removing the food from the table.
☒ D. We can now remove the food from the table.

Question ID : 9277592685
Status : Answered
Chosen Option : D

Q.20 Select the correct active form of the given sentence.

Two more steel plants will be set up by Mittal and Co.

- Ans ☒ A. Mittal and Co. will be setting up two more steel plants.
☒ B. Mittal and Co. is setting up two more steel plants.
☒ C. Mittal and Co. will set up two more steel plants.
☒ D. Mittal and Co. will have set up two more steel plants.

Question ID : 9277592684
Status : Answered
Chosen Option : C

Q.21 Select the correct passive form of the given sentence.

The banks pay interest on deposits.

- Ans ☒ A. Interest should be paid by the banks on deposits.
☒ B. Interest is paid by the banks on deposits.
☒ C. Interest is being paid by the banks on deposits.
☒ D. Interest has been paid by the banks on deposits.

Question ID : 9277592683
Status : Answered
Chosen Option : D

Comprehension:

Read the following passage and answer the questions given after it.

Manipur Forest Department is preparing to once again tag five Amur falcons with satellite transmitters this year, after it lost contact with one of the two falcons which were tagged with transmitters last year.

Weighing about 160 grams, the long-distance migratory birds arrive in North East India, mainly Manipur and Nagaland, in thousands for roosting. The birds are expected to arrive in Tamenglong, a district in Manipur, by the second week of October.

Two Amur falcons named 'Tamenglong' and 'Manipur' were tagged with satellite transmitters last year as a part of a project to study migratory birds during their stopover in Tamenglong district in the state. Unfortunately, 'Manipur' was killed by poachers in its roosting ground in the district four days after its release. 'Tamenglong' continued its journey for 5 days, 7 hours and covered a distance of 5,700 km and reached the African continent, where it lost contact over Zambia.

Experts said that after roosting in the Northeast for about 45 days, the migratory birds will continue their southward journey. They come from their breeding grounds in Northern China, Eastern Mongolia and far East Russia en route to their wintering grounds in South Africa. The one-way journey from their breeding to wintering grounds via India is about 20,000 kms and the birds do this twice a year, the expert added.

Amur falcons spend three to four weeks in many parts of Manipur to build fat reserves by foraging on termites that emerge during this time. As a result, this stopover in North East India becomes extremely crucial for the falcons as they need to fly for five to six days non-stop across Peninsular India and then make a sea crossing over the Arabian Sea to their next stopover in Somalia.

As per the expert, almost all of the world's Amur falcons pass through this region for its abundant termite and other insect food available in Manipur and Nagaland.

SubQuestion No : 22

Q.22 Which of the following statements is NOT true according to the passage?

- Ans** ☒ **A. The last destination of Amur falcons is Somalia.**
- ☐ **B. Amur falcons fly about 20,000 kms one way from their breeding to wintering grounds.**
- ☐ **C. Amur falcons come to Manipur from Northern China, Eastern Mongolia and far East Russia.**
- ☐ **D. Amur falcons stay in Manipur and Mizoram region for the abundant termite and other insect food available there.**

Question ID : 9277592706

Status : Answered

Chosen Option : B



Comprehension:

Read the following passage and answer the questions given after it.

Manipur Forest Department is preparing to once again tag five Amur falcons with satellite transmitters this year, after it lost contact with one of the two falcons which were tagged with transmitters last year.

Weighing about 160 grams, the long-distance migratory birds arrive in North East India, mainly Manipur and Nagaland, in thousands for roosting. The birds are expected to arrive in Tamenglong, a district in Manipur, by the second week of October.

Two Amur falcons named 'Tamenglong' and 'Manipur' were tagged with satellite transmitters last year as a part of a project to study migratory birds during their stopover in Tamenglong district in the state. Unfortunately, 'Manipur' was killed by poachers in its roosting ground in the district four days after its release. 'Tamenglong' continued its journey for 5 days, 7 hours and covered a distance of 5,700 km and reached the African continent, where it lost contact over Zambia.

Experts said that after roosting in the Northeast for about 45 days, the migratory birds will continue their southward journey. They come from their breeding grounds in Northern China, Eastern Mongolia and far East Russia en route to their wintering grounds in South Africa.

The one-way journey from their breeding to wintering grounds via India is about 20,000 kms and the birds do this twice a year, the expert added.

Amur falcons spend three to four weeks in many parts of Manipur to build fat reserves by foraging on termites that emerge during this time. As a result, this stopover in North East India becomes extremely crucial for the falcons as they need to fly for five to six days non-stop across Peninsular India and then make a sea crossing over the Arabian Sea to their next stopover in Somalia.

As per the expert, almost all of the world's Amur falcons pass through this region for its abundant termite and other insect food available in Manipur and Nagaland.

SubQuestion No : 23

Q.23 Over which African country did Tamenglong lose its contact?

- Ans** ☒ **A. Zambia**
☐ **B. Zaire**
☐ **C. Zimbabwe**
☐ **D. South Africa**

Question ID : 9277592703

Status : Answered

Chosen Option : A



Comprehension:

Read the following passage and answer the questions given after it.

Manipur Forest Department is preparing to once again tag five Amur falcons with satellite transmitters this year, after it lost contact with one of the two falcons which were tagged with transmitters last year.

Weighing about 160 grams, the long-distance migratory birds arrive in North East India, mainly Manipur and Nagaland, in thousands for roosting. The birds are expected to arrive in Tamenglong, a district in Manipur, by the second week of October.

Two Amur falcons named 'Tamenglong' and 'Manipur' were tagged with satellite transmitters last year as a part of a project to study migratory birds during their stopover in Tamenglong district in the state. Unfortunately, 'Manipur' was killed by poachers in its roosting ground in the district four days after its release. 'Tamenglong' continued its journey for 5 days, 7 hours and covered a distance of 5,700 km and reached the African continent, where it lost contact over Zambia.

Experts said that after roosting in the Northeast for about 45 days, the migratory birds will continue their southward journey. They come from their breeding grounds in Northern China, Eastern Mongolia and far East Russia en route to their wintering grounds in South Africa.

The one-way journey from their breeding to wintering grounds via India is about 20,000 kms and the birds do this twice a year, the expert added.

Amur falcons spend three to four weeks in many parts of Manipur to build fat reserves by foraging on termites that emerge during this time. As a result, this stopover in North East India becomes extremely crucial for the falcons as they need to fly for five to six days non-stop across Peninsular India and then make a sea crossing over the Arabian Sea to their next stopover in Somalia.

As per the expert, almost all of the world's Amur falcons pass through this region for its abundant termite and other insect food available in Manipur and Nagaland.

SubQuestion No : 24

Q.24 "They come from their breeding grounds in Northern China, Eastern Mongolia and far East Russia en route to their wintering grounds in South Africa." What does 'en route' in this context mean?

- Ans ☒ A. During the course of their journey
- ☐ B. At their destination
- ☐ C. Exactly at the middle of the journey
- ☐ D. At the beginning of their journey

Question ID : 9277592705

Status : Answered

Chosen Option : C



Comprehension:

Read the following passage and answer the questions given after it.

Manipur Forest Department is preparing to once again tag five Amur falcons with satellite transmitters this year, after it lost contact with one of the two falcons which were tagged with transmitters last year.

Weighing about 160 grams, the long-distance migratory birds arrive in North East India, mainly Manipur and Nagaland, in thousands for roosting. The birds are expected to arrive in Tamenglong, a district in Manipur, by the second week of October.

Two Amur falcons named 'Tamenglong' and 'Manipur' were tagged with satellite transmitters last year as a part of a project to study migratory birds during their stopover in Tamenglong district in the state. Unfortunately, 'Manipur' was killed by poachers in its roosting ground in the district four days after its release. 'Tamenglong' continued its journey for 5 days, 7 hours and covered a distance of 5,700 km and reached the African continent, where it lost contact over Zambia.

Experts said that after roosting in the Northeast for about 45 days, the migratory birds will continue their southward journey. They come from their breeding grounds in Northern China, Eastern Mongolia and far East Russia en route to their wintering grounds in South Africa.

The one-way journey from their breeding to wintering grounds via India is about 20,000 kms and the birds do this twice a year, the expert added.

Amur falcons spend three to four weeks in many parts of Manipur to build fat reserves by foraging on termites that emerge during this time. As a result, this stopover in North East India becomes extremely crucial for the falcons as they need to fly for five to six days non-stop across Peninsular India and then make a sea crossing over the Arabian Sea to their next stopover in Somalia.

As per the expert, almost all of the world's Amur falcons pass through this region for its abundant termite and other insect food available in Manipur and Nagaland.

SubQuestion No : 25

Q.25 The stopover in Manipur is important for the Amur falcons because:

- a. they need to rest during their long journey to Zambia
- b. they need to rebuild their reserves of fat for their onward journey
- c. they make a sea crossing over the Arabian Sea

Which of the given reasons are true?

- Ans
- ☒ A. a and c
 - ☒ B. a and b
 - ☒ C. b and c
 - ☒ D. a, b and c

Question ID : 9277592704

Status : Not Answered

Chosen Option : --

Q.26 जिन शब्दों के रूप में लिंग, वचन, पुरुष, कारक आदि के कारण कोई विकार उत्पन्न नहीं होता, उन्हें क्या कहते हैं?

- Ans
- ☒ A. क्रिया शब्द
 - ☒ B. विशेषण शब्द
 - ☒ C. संज्ञा शब्द
 - ☒ D. अव्यय

Question ID : 9277592715

Status : Answered

Chosen Option : D

Q.27 भूतकाल के मुख्यतः कितने भेद हैं?

- Ans
- ☒ A. पाँच
 - ☒ B. तीन
 - ☒ C. छह
 - ☒ D. बारह

Question ID : 9277592725

Status : Answered

Chosen Option : A

Q.28 बात का धनी - मुहावरे का अर्थ है -

- Ans ☒ A. बहुत बोलने वाला
☒ B. बात बनाने में माहिर
☒ C. बहुत अधिक जानकारी वाला
☒ D. वायदे का पक्का

Question ID : 9277592720
Status : Answered
Chosen Option : B

Q.29 'विद्यार्थी' का संधि भेद है -

- Ans ☒ A. अयादि संधि
☒ B. गुण संधि
☒ C. यण संधि
☒ D. दीर्घ संधि

Question ID : 9277592708
Status : Answered
Chosen Option : D

Q.30 'टुक - टूक' शब्द युग्म के सही अर्थ भेद का चयन कीजिए-

- Ans ☒ A. थोड़ा - टुकड़ा
☒ B. निशान - टुकड़ा
☒ C. टुकड़ा - थोड़ा
☒ D. कटा - चुनना

Question ID : 9277592717
Status : Answered
Chosen Option : C

Q.31 जिन क्रियाओं का व्यापार और फल कर्ता पर हो, वे क्या कहलाती हैं?

- Ans ☒ A. सकर्मक क्रिया
☒ B. प्रेरणार्थक क्रिया
☒ C. नामधातु क्रिया
☒ D. अकर्मक क्रिया

Question ID : 9277592714
Status : Not Answered
Chosen Option : --

Q.32 कौन सा शब्द प्रति उपसर्ग से नहीं बना है?

- Ans ☒ A. प्रतिवादी
☒ B. प्रत्येक
☒ C. प्रत्यक्ष
☒ D. प्रकाश

Question ID : 9277592710
Status : Answered
Chosen Option : D

Q.33 विलोम शब्द का कौन सा युग्म गलत है?

- Ans ☒ A. जटिल - सरल
☒ B. अंत - आदि
☒ C. धूप - छाँह
☒ D. तीव्र - प्रकाश

Question ID : 9277592716
Status : Answered
Chosen Option : D

Q.34 मुझे बताओ कि तुम्हारा जन्म कब हुआ था। रचना के आधार पर वाक्य का प्रकार बताइए।

- Ans ☒ A. संयुक्त वाक्य
☒ B. मिश्र वाक्य
☒ C. विधानवाचक वाक्य
☒ D. सरल वाक्य

Question ID : 9277592724
Status : Answered
Chosen Option : A

Q.35 मित्रता निभाना सबके बस की बात नहीं है। रेखांकित शब्द का संज्ञा भेद है -

- Ans ☒ A. भाववाचक संज्ञा
☒ B. जातिवाचक संज्ञा
☒ C. समूहवाचक संज्ञा
☒ D. व्यक्तिवाचक संज्ञा

Question ID : 9277592711
Status : Answered
Chosen Option : A

Q.36 निम्नलिखित में से कौन सा वाक्य शुद्ध है?

- Ans ☒ A. आपका पत्र सधन्यवाद सहित मिला।
☒ B. मेरा नाम आनंद कुमार है।
☒ C. रेलवे के कर्मचारियों की कई गिरफ्तारी हुई।
☒ D. मेरा नाम श्री प्रकाश कुमार जी है।

Question ID : 9277592727
Status : Answered
Chosen Option : B

Q.37 'खग' का समानार्थी शब्द होगा -

- Ans ☒ A. शिव
☒ B. पक्षी
☒ C. घास
☒ D. तारा

Question ID : 9277592719
Status : Answered
Chosen Option : B

Q.38 विसर्ग के साथ स्वर या व्यंजन के मेल से उत्पन्न विकार को कौन सी संधि कहते हैं?

- Ans ☒ A. विसर्ग संधि
☒ B. व्यंजन संधि
☒ C. अक्षर संधि
☒ D. स्वर संधि

Question ID : 9277592707
Status : Answered
Chosen Option : A

Q.39 द्विगु समास का पूर्वपद कैसा होता है?

- Ans ☒ A. विशेषणबोधक
☒ B. गुणबोधक
☒ C. भावबोधक
☒ D. संख्याबोधक

Question ID : 9277592709
Status : Answered
Chosen Option : D

Q.40 सलाई शब्द का तत्सम रूप है -

- Ans ☒ A. शिला
☒ B. सिलाई
☒ C. शलाका
☒ D. धागा

Question ID : 9277592722
Status : Answered
Chosen Option : C

Q.41 हम सब शिमला जा रहे हैं। रेखांकित सर्वनाम का भेद है -

- Ans ☒ A. संबंधवाचक सर्वनाम
☒ B. अनिश्चयवाचक सर्वनाम
☒ C. अन्य पुरुषवाचक सर्वनाम
☒ D. उत्तम पुरुषवाचक सर्वनाम

Question ID : 9277592712
Status : Answered
Chosen Option : D

Q.42 पंतीले में बहुत दूध है। वाक्य में प्रयुक्त रेखांकित विशेषण है -

- Ans ☒ A. सार्वनामिक विशेषण
☒ B. अनिश्चित परिमाणवाचक विशेषण
☒ C. अनिश्चित संख्यावाचक विशेषण
☒ D. गुणवाचक विशेषण

Question ID : 9277592713
Status : Answered
Chosen Option : B

Q.43 'मूर्खों में कुछ पढ़ा लिखा व्यक्ति' अर्थ के लिए उचित लोकोक्ति है -

- Ans ☒ A. अंधों में काना राजा
☐ B. चिराग तले अँधेरा
☐ C. अकेला घना भाड़ नहीं फोड़ सकता
☐ D. होनहार बिरवान के होत धीकने पात

Question ID : 9277592721
Status : Answered
Chosen Option : A

Q.44 आप शायद दिल्ली के रहने वाले हैं? वाक्य के अंत में लगे विराम चिह्न का नाम है -

- Ans ☐ A. योजक चिह्न
☐ B. विस्मयादिबोधक चिह्न
☐ C. निर्देशक चिह्न
☒ D. प्रश्नवाचक चिह्न

Question ID : 9277592726
Status : Answered
Chosen Option : D

Q.45 निम्नलिखित में से कौन सा विदेशी शब्द नहीं है?

- Ans ☐ A. कालीन
☐ B. जागीर
☒ C. भक्त
☐ D. मजबूर

Question ID : 9277592723
Status : Answered
Chosen Option : C

Q.46 'जो नया आया हुआ हो' वाक्यांश के लिए एक शब्द है -

- Ans ☐ A. नवचर
☐ B. नवीन
☐ C. नव्यगामी
☒ D. नवागतुक

Question ID : 9277592718
Status : Answered
Chosen Option : D

Comprehension:

निम्नलिखित गद्यांश को पढ़कर उनके दिए गए प्रश्नों का सही विकल्प का चयन करें:

जाड़े के दिन थे और रात का समय था। नमक के सिपाही, चौकीदार सभी निद्रा में मस्त थे। मुंशी वंशीधर को यहाँ आए अभी छह महीने से अधिक न हुए थे लेकिन इस थोड़े-से समय में ही उन्होंने अपनी कार्यकुशलता और उत्तम आचार से अफसरों को मोहित कर लिया था। अफसर लोग उन पर बहुत विश्वास करने लगे थे। नमक के दफ्तर से एक मील पूर्व की ओर जमुना बहती थी, उस पर नावों का एक पुल बना हुआ था। दारोगा जी किवाड़ बंद किए मीठी नींद सो रहे थे। अचानक आँख खुली तो नदी के प्रवाह की जगह गाड़ियों की गड़गड़ाहट तथा मल्लाहों का कोलाहल सुनाई दिया। उठ बैठे। इतनी रात गए गाड़ियों नदी के पार क्यों जाती हैं? अवश्य कुछ न कुछ गोलमाल है। वरदी पहनी, तमंचा जेब में रखा और बात की बात में घोड़ा बढ़ाए हुए पुल पर आ पहुँचे। गाड़ियों की एक लंबी कतार पुल के पार जाती देखी। डॉक्टर पूछा, "किसकी गाड़ियों हैं?"

SubQuestion No : 47

Q.47 गद्यांश के आधार पर मुंशी वंशीधर के स्वभाव की विशेषता बताइए।

Ans ☒ A. निद्राप्रिय

☒ B. कार्यकुशल तथा उत्तम आचार

☒ C. चतुर

☒ D. दबंग व्यक्तित्व

Question ID : 9277592732

Status : Answered

Chosen Option : B

Comprehension:

निम्नलिखित गद्यांश को पढ़कर उनके दिए गए प्रश्नों का सही विकल्प का चयन करें:

जाड़े के दिन थे और रात का समय था। नमक के सिपाही, चौकीदार सभी निद्रा में मस्त थे। मुंशी वंशीधर को यहाँ आए अभी छह महीने से अधिक न हुए थे लेकिन इस थोड़े-से समय में ही उन्होंने अपनी कार्यकुशलता और उत्तम आचार से अफसरों को मोहित कर लिया था। अफसर लोग उन पर बहुत विश्वास करने लगे थे। नमक के दफ्तर से एक मील पूर्व की ओर जमुना बहती थी, उस पर नावों का एक पुल बना हुआ था। दारोगा जी किवाड़ बंद किए मीठी नींद सो रहे थे। अचानक आँख खुली तो नदी के प्रवाह की जगह गाड़ियों की गड़गड़ाहट तथा मल्लाहों का कोलाहल सुनाई दिया। उठ बैठे। इतनी रात गए गाड़ियों नदी के पार क्यों जाती हैं? अवश्य कुछ न कुछ गोलमाल है। वरदी पहनी, तमंचा जेब में रखा और बात की बात में घोड़ा बढ़ाए हुए पुल पर आ पहुँचे। गाड़ियों की एक लंबी कतार पुल के पार जाती देखी। डॉक्टर पूछा, "किसकी गाड़ियों हैं?"

SubQuestion No : 48

Q.48 कतार शब्द का क्या अर्थ है?

Ans ☒ A. पंक्ति

☒ B. घेरा

☒ C. जोर से रोना

☒ D. एक क्रम

Question ID : 9277592731

Status : Answered

Chosen Option : A

Comprehension:

निम्नलिखित गद्यांश को पढ़कर उनके दिए गए प्रश्नों का सही विकल्प का चयन करें:

जाड़े के दिन थे और रात का समय था। नमक के सिपाही, चौकीदार सभी निद्रा में मस्त थे। मुंशी वंशीधर को यहाँ आए अभी छह महीने से अधिक न हुए थे लेकिन इस थोड़े-से समय में ही उन्होंने अपनी कार्यकुशलता और उत्तम आचार से अफसरों को मोहित कर लिया था। अफसर लोग उन पर बहुत विश्वास करने लगे थे। नमक के दफ्तर से एक मील पूर्व की ओर जमुना बहती थी, उस पर नावों का एक पुल बना हुआ था। दारोगा जी किवाड़ बंद किए मीठी नींद सो रहे थे। अचानक आँख खुली तो नदी के प्रवाह की जगह गाड़ियों की गड़गड़ाहट तथा मल्लाहों का कोलाहल सुनाई दिया। उठ बैठे। इतनी रात गए गाड़ियों नदी के पार क्यों जाती हैं? अवश्य कुछ न कुछ गोलमाल है। वरदी पहनी, तमंचा जेब में रखा और बात की बात में घोड़ा बढ़ाए हुए पुल पर आ पहुँचे। गाड़ियों की एक लंबी कतार पुल के पार जाती देखी। डॉक्टर पूछा, "किसकी गाड़ियाँ हैं?"

SubQuestion No : 49

Q.49 मुंशी वंशीधर ने अफसरों को किस माध्यम से मोहित कर लिया था?

- Ans ☒ A. अपनी बात बनाने की कला के माध्यम से
- ☒ B. अपने अद्भुत व्यक्तित्व के माध्यम से
- ☒ C. अपनी कार्यकुशलता और उत्तम आचार के माध्यम से
- ☒ D. अपनी ताकत तथा हिम्मत के माध्यम से

Question ID : 9277592729

Status : Answered

Chosen Option : C

Comprehension:

निम्नलिखित गद्यांश को पढ़कर उनके दिए गए प्रश्नों का सही विकल्प का चयन करें:

जाड़े के दिन थे और रात का समय था। नमक के सिपाही, चौकीदार सभी निद्रा में मस्त थे। मुंशी वंशीधर को यहाँ आए अभी छह महीने से अधिक न हुए थे लेकिन इस थोड़े-से समय में ही उन्होंने अपनी कार्यकुशलता और उत्तम आचार से अफसरों को मोहित कर लिया था। अफसर लोग उन पर बहुत विश्वास करने लगे थे। नमक के दफ्तर से एक मील पूर्व की ओर जमुना बहती थी, उस पर नावों का एक पुल बना हुआ था। दारोगा जी किवाड़ बंद किए मीठी नींद सो रहे थे। अचानक आँख खुली तो नदी के प्रवाह की जगह गाड़ियों की गड़गड़ाहट तथा मल्लाहों का कोलाहल सुनाई दिया। उठ बैठे। इतनी रात गए गाड़ियों नदी के पार क्यों जाती हैं? अवश्य कुछ न कुछ गोलमाल है। वरदी पहनी, तमंचा जेब में रखा और बात की बात में घोड़ा बढ़ाए हुए पुल पर आ पहुँचे। गाड़ियों की एक लंबी कतार पुल के पार जाती देखी। डॉक्टर पूछा, "किसकी गाड़ियाँ हैं?"

SubQuestion No : 50

Q.50 गद्यांश का उचित शीर्षक है -

- Ans ☒ A. कुछ गोलमाल
- ☒ B. गाड़ियों की गड़गड़ाहट
- ☒ C. घोड़े की सवारी
- ☒ D. दारोगा जी

Question ID : 9277592730

Status : Answered

Chosen Option : D

Section : Accountancy and Auditing and Income Tax

Q.1 Income is taxable under the head 'Salaries' only if there exists a _____ relationship between the payer and payee.

- Ans ☒ A. Employer - Employee
- ☒ B. Government - Member of Parliament
- ☒ C. Seller - Buyer
- ☒ D. Student - Principal

Question ID : 9277592785

Status : Answered

Chosen Option : A

Q.2 With respect to a Bill of Exchange, which of the following statements is INCORRECT?

- Ans ☐ A. The party which accepts the order is known as the acceptor.
☐ B. The party which makes the order is known as the drawer.
☐ C. The party to whom the amount has to be paid is known as the payee.
☒ D. The drawer and the payee can never be the same.

Question ID : 9277592739
Status : Answered
Chosen Option : A

Q.3 With respect to the concept of Bank Reconciliation Statement (BRS), which of the following statements is correct?

- Ans ☐ A. BRS is the process of reconciling cash column of the cash book and bank column of the cash book.
☒ B. There are 3 types of differences between the cash and pass book, namely timing, transactions and errors.
☐ C. Overcasting of the debit side of the cash book is an example of a difference that is due to timing.
☐ D. Debit balance in the cash book is same as overdraft as per the pass book.

Question ID : 9277592762
Status : Answered
Chosen Option : A

Q.4 Gift to an employee by an employer, where the value of the gift is below _____ shall be treated as a tax-free perquisite.

- Ans ☐ A. Rs.1,00,000
☒ B. Rs.5,000
☐ C. Rs.50,000
☐ D. Rs.25,000

Question ID : 9277592791
Status : Answered
Chosen Option : B

Q.5 ₹500 paid for rent is debited to Landlord's Account'. For the above error, what is the rectification entry?

- Ans ☒ A. Rent A/c Dr. 500
To Landlord's Personal A/c 500
☐ B. Landlord's Personal A/c Dr. 500
Rent A/c Dr. 500
To Bank A/c 1,000
☐ C. Rent A/c Dr. 500
To Bank A/c 500
☐ D. Rent A/c Dr. 1,000
To Landlord's Personal A/c 1,000

Question ID : 9277592766
Status : Answered
Chosen Option : D

Q.6 Which of the following statements is correct?

- Ans ☐ A. Administrative expenses are apportioned among various departments on basis of the purchase value of each department.
- ☐ B. Administrative expenses are apportioned among various departments on basis of the sales value of each department.
- ☐ C. Administrative expenses are apportioned among various departments on basis of the value of assets of each department.
- ☒ D. Administrative expenses are apportioned among various departments on basis of the time spent by employees in each department.

Question ID : 9277592756
Status : Not Answered
Chosen Option : --

Q.7 निर्धारण वर्ष 2020-21 के लिए, धारा 80C के अंतर्गत अधिकतम अनुमत कटौती _____ है।

- Ans ☒ A. 1,50,000 रुपये
- ☐ B. 2,00,000 रुपये
- ☐ C. 1,00,000 रुपये
- ☐ D. 2,50,000 रुपये

Question ID : 9277592794
Status : Answered
Chosen Option : A

Q.8 For the purpose of Sub-Section (12) of Section 143 of the Companies Act 2013, in case the auditor has sufficient reason to believe that an offence involving fraud is being or has been committed against the company by officers or employees of the company, he shall report the matter to the Central Government immediately but not later than _____ of his knowledge and after following the necessary procedure.

- Ans ☒ A. sixty days
- ☐ B. ninety days
- ☐ C. eighty days
- ☐ D. seventy days

Question ID : 9277592780
Status : Answered
Chosen Option : A

Q.9 For the Assessment Year 2020-21, Section 192A provides for deduction of tax at the rate of _____ on premature taxable withdrawal from the employees' provident fund scheme.

- Ans ☐ A. 15 Percent
- ☐ B. 20 Percent
- ☒ C. 10 Percent
- ☐ D. 5 Percent

Question ID : 9277592802
Status : Answered
Chosen Option : D

Q.10 Accounting Standards as well as the Companies Act, 2013 requires depreciation to be charged on a _____.

- Ans ☒ A. component basis
☐ B. notional basis
☐ C. fictitious basis
☐ D. supernumerary basis

Question ID : 9277592749
Status : Answered
Chosen Option : C

Q.11 धारा 194B के प्रावधानों के अनुसार, यदि कोई व्यक्ति लॉटरी या क्रॉसवर्ड पहेली या कार्ड गेम और किसी भी प्रकार के अन्य खेल को जीतने पर प्राप्त आय किसी अन्य व्यक्ति, चाहे वह निवासी हो या अनिवासी, को भुगतान करता है तो उसके लिए _____ की दर से उस राशि पर आयकर की कटौती करना आवश्यक है यदि भुगतान की राशि _____ से अधिक है।

- Ans ☐ A. 10 प्रतिशत; ₹30,000
☒ B. 30 प्रतिशत; ₹10,000
☐ C. 10 प्रतिशत; ₹10,000
☐ D. 20 प्रतिशत; ₹10,000

Question ID : 9277592803
Status : Answered
Chosen Option : B

Q.12 Favourable balance as per cash book ₹10,000 is the starting point of a bank reconciliation statement.

Cheque issued but not presented ₹3,000.

Cheque deposited but not credited ₹4,000.

What will be the balance as per pass book as per the bank reconciliation statement?

- Ans ☒ A. ₹9,000
☐ B. ₹17,000
☐ C. ₹11,000
☐ D. ₹14,000

Question ID : 9277592761
Status : Answered
Chosen Option : C

Q.13 ऑडिट (audit) शब्द की व्युत्पत्ति लैटिन शब्द 'audire' से हुई है जिसका अर्थ _____ है।

- Ans ☐ A. सक्रिय करना
☒ B. सुनना
☐ C. सोचना
☐ D. ढूँढना

Question ID : 9277592772
Status : Answered
Chosen Option : B

Q.14 निर्धारण वर्ष 2020-21 के लिए, _____ में इलेक्ट्रिक वाहन की खरीद के लिए लिए गए ऋण के लिए देय ब्याज के संबंध में कटौती प्रदान की गई है।

- Ans
- ☐ A. धारा 80GG
 - ☐ B. धारा 80EEA
 - ☒ C. धारा 80EEB
 - ☐ D. धारा 80G

Question ID : 9277592799
Status : Answered
Chosen Option : C

Q.15 Unintentional omission or commission of amounts and accounts in the process of recording the transactions are commonly known as _____.

- Ans
- ☐ A. frauds
 - ☐ B. financial shenanigans
 - ☐ C. scams
 - ☒ D. errors

Question ID : 9277592763
Status : Answered
Chosen Option : B

Q.16 Purchase of computer is recorded as an office expense.
The above is regarded as a/an:

- Ans
- ☐ A. compensating error
 - ☐ B. error of omission
 - ☐ C. error of commission
 - ☒ D. error of principle

Question ID : 9277592765
Status : Answered
Chosen Option : D

Q.17 As per the provisions of the Companies Act, 2013, (except in the case of insurance company, banking company, company engaged in generation of supply of electricity etc.) Balance Sheet is required to be prepared as per the form set out in _____.

- Ans
- ☐ A. Part II of Schedule III
 - ☐ B. Part II of Schedule II
 - ☒ C. Part I of Schedule III
 - ☐ D. Part I of Schedule II

Question ID : 9277592768
Status : Answered
Chosen Option : C

Q.18 Which of the following statements is INCORRECT with respect to basic principles issued by SA 200 that govern the auditor's responsibilities whenever an audit is carried out?

- Ans ☒ A. The auditor should not obtain knowledge about the client's business to determine the nature, timing and the extent of the audit procedures.
- ☐ B. Proper working papers should be maintained by the auditor to evidence the audit work.
- ☐ C. The auditor should not disclose the client's information to anybody without the client's permission or under any regulatory requirement.
- ☐ D. The auditor should be straightforward, honest, sincere and free from any influence on his audit work.

Question ID : 9277592775
Status : Answered
Chosen Option : A

Q.19 Which of the following statements is INCORRECT?

- Ans ☒ A. Under self-balancing ledger system, only two ledger accounts are prepared (Debtors Ledger and Nominal Ledger).
- ☐ B. Under self-balancing ledger system, a complete trial balance can also be prepared by taking up the balances of ledger accounts.
- ☐ C. Debtors Ledger is also known as Sold Ledger or Sales Ledger, which is maintained for recording personal accounts of trade debtors.
- ☐ D. Under self-balancing ledger system, each ledger is prepared under double entry system.

Question ID : 9277592742
Status : Not Answered
Chosen Option : --

Q.20 Mr A, an employee, has been provided by his employer, a motor car of 1.3 litre capacity which is owned by the employer. The car has been used for personal as well as office purpose. Running expenses are paid by the employer. What will be the value of taxable perquisite for the PY 2019-20, assuming that chauffeur facility is not being provided?

- Ans ☐ A. Rs.1,600 per month
- ☐ B. Rs.2,400 per month
- ☐ C. Rs.3,300 per month
- ☒ D. Rs.1,800 per month

Question ID : 9277592790
Status : Answered
Chosen Option : A

Q.21 A Receipts and Payments Account is a summary of the _____.

- Ans ☐ A. Trading Account
- ☐ B. Profit and Loss Account
- ☒ C. Cash Book without date column
- ☐ D. Cash Book with date column

Question ID : 9277592744
Status : Answered
Chosen Option : A

Q.22 Payment of tuition fees to any university, college, school or other educational institution within India for full-time education for _____ is eligible to qualify for deduction under Section 80C.

- Ans ☒ A. maximum one child
☒ B. maximum two children
☒ C. maximum four children
☒ D. maximum three children

Question ID : 9277592796
Status : Answered
Chosen Option : B

Q.23 Which of the following statements is INCORRECT?

- Ans ☒ A. Income and gains other than sales are written on the credit side of the Profit and Loss Account.
☒ B. Only those revenue expenses and losses which relate to the current year are debited to the Profit and Loss Account
☒ C. Carriage outwards is recorded on the credit side of the Profit and Loss Account.
☒ D. The Profit and Loss Account starts with gross profit on the credit side or gross loss on the debit side.

Question ID : 9277592737
Status : Answered
Chosen Option : B

Q.24 For the Assessment Year 2020-21, _____ provides deduction to an individual assessee in respect of interest on loan taken for higher education.

- Ans ☒ A. Section 80E
☒ B. Section 80DDB
☒ C. Section 80DD
☒ D. Section 80EE

Question ID : 9277592798
Status : Answered
Chosen Option : A

Q.25 Which of the following statements is correct?

- Ans ☒ A. Salaries paid is shown on the credit side of the Profit and Loss Account but outstanding salaries (when given in additional information) is shown on the Liabilities side of the Balance Sheet and is added to salaries in the Profit and Loss Account.
☒ B. Salaries paid is shown on the debit side of the Profit and Loss Account but outstanding salaries (when given in additional information) is shown on the Assets side of the Balance Sheet and is deducted from salaries in the Profit and Loss Account.
☒ C. Salaries paid is shown on the debit side of the Profit and Loss Account but outstanding salaries (when given in additional information) is shown on the Assets side of the Balance Sheet and is added to salaries in the Profit and Loss Account.
☒ D. Salaries paid is shown on the debit side of the Profit and Loss Account but outstanding salaries (when given in additional information) is shown on the Liabilities side of the Balance Sheet and is added to salaries in the Profit and Loss Account.

Question ID : 9277592734
Status : Answered
Chosen Option : C

Q.26 Which of the following is regarded as a Position Statement?

- Ans ☒ A. Balance Sheet
- ☐ B. Profit and Loss Appropriation Account
- ☐ C. Profit and Loss Account
- ☐ D. Trading Account

Question ID : 9277592733
Status : Answered
Chosen Option : A

Q.27 Which of the following statements is INCORRECT?

- Ans ☐ A. It is customer's duty to check the entries and immediately inform the bank of any error that he may notice.
- ☒ B. Bank pass book represents a copy of the ledger account of the bank in the books of the customer.
- ☐ C. These days customers can easily access their bank statement online any time as facilitated by net banking.
- ☐ D. These days, many bank ATMs have automated machines where one gets the passbook updated without any manual intervention

Question ID : 9277592759
Status : Not Answered
Chosen Option : --

Q.28 If rent is paid for a house situated in Mumbai, while calculating the exempted value of the house rent allowance, _____ of salary will be considered under Section 10(13A) of the Income Tax Act, 1961.

- Ans ☐ A. 40 Percent
- ☐ B. 20 Percent
- ☒ C. 50 Percent
- ☐ D. 30 Percent

Question ID : 9277592789
Status : Answered
Chosen Option : C

Q.29 As per Section 203AA, the Director General of Income Tax (Systems) has to deliver statement of TDS in _____ by 31 July following the Financial Year.

- Ans ☐ A. Form 26 AP
- ☐ B. Form 25 AS
- ☒ C. Form 26 AS
- ☐ D. Form 25 AP

Question ID : 9277592807
Status : Answered
Chosen Option : C

Q.30 इनमें से कौन सा कथन असत्य है?

- Ans ☒ A. अवधि के अंत में आय एवं व्यय खाता शेष को प्राप्ति एवं भुगतान खातों में स्थानांतरित कर दिया जाता है।
- ☐ B. पूँजी की प्राप्ति और भुगतान के साथ ही राजस्व की प्रकृति को प्राप्ति और भुगतान खातों में दर्ज किया जाता है।
- ☐ C. अवधि के अंत में प्राप्ति एवं भुगतान खाते का शेष, प्राप्त रोकड़ और भुगतान की गई राशि के बीच अंतर को दर्शाता है।
- ☐ D. लाभकारी संगठनों के मामले में, लाभ एवं हानि खाते के सदृश ही आय एवं व्यय खाता होता है और इसे उसी तरीके से आहरित किया जाता है।

Question ID : 9277592746

Status : Answered

Chosen Option : D

Q.31 During the year 2019-20, subscription received in cash is ₹84,000. It includes ₹3,200 for the year 2018-19 and ₹1,200 for the year 2020-21. Also, ₹6,000 is still to be received for the year 2019-20. Calculate the amount to be credited to the Income and Expenditure account in respect of subscription.

- Ans ☐ A. Rs. 88,600
- ☐ B. Rs. 84,000
- ☐ C. Rs. 90,000
- ☒ D. Rs. 85,600

Question ID : 9277592747

Status : Answered

Chosen Option : C

Q.32 _____ is the examination by the auditor of all documentary evidences, which are available to support the authenticity of the transaction entered in the client's record.

- Ans ☐ A. Accounting
- ☐ B. Book-keeping
- ☒ C. Vouching
- ☐ D. Recording

Question ID : 9277592777

Status : Answered

Chosen Option : C

Q.33 On receipt of the bill, which of the following entries is made by the payee in his books of accounts?

- Ans ☐ A. Bank Account Dr.
Discount Account Dr.
To Bills Receivable Account
- ☐ B. Drawee Account Dr.
To Bank Account
- ☐ C. Drawer Account Dr.
To Bills Payable Account
- ☒ D. Bills Receivable Account Dr.
To Drawee/Maker of the Bill

Question ID : 9277592741

Status : Answered

Chosen Option : C

Q.34 Which of the following statements is INCORRECT?

- Ans ☐ A. Opening inventory is written on the debit side of the Trading Account.
- ☐ B. Direct expenses are written on the debit side of the Trading Account.
- ☐ C. Turnover is written on the credit side of the Trading Account.
- ☒ D. Freight inwards are written on the credit side of the Trading Account.

Question ID : 9277592736
Status : Answered
Chosen Option : C

Q.35 _____ means 'an enquiry into the value, ownership, title, existence, possession and presence of any charge on the assets'.

- Ans ☐ A. Ratio analysis
- ☒ B. Verification
- ☐ C. Recording
- ☐ D. Book-keeping

Question ID : 9277592779
Status : Answered
Chosen Option : C

Q.36 स्वतःसंतुलनशील प्रणाली (सेल्फ-बैलेंसिंग सिस्टम) के संदर्भ में, इनमें से कौन सा कथन असत्य है?

- Ans ☐ A. यह प्रणाली अंतरिम खातों को तैयार करने और अंतिम खातों को एक पूर्ण परीक्षण शेष के रूप में ड्राफ्ट करने में मदद करती है क्योंकि इसे व्यक्तिगत खाता-बही शेष के सारांशन से पहले तैयार किया जा सकता है।
- ☒ B. आंतरिक जांच प्रणाली को मजबूत नहीं किया जा सकता है क्योंकि स्वतंत्र रूप से प्रत्येक बही-खाते की सटीकता जांचना असंभव होता है।
- ☐ C. यदि स्वतःसंतुलनशील प्रणाली के तहत बही-खातों का रखरखाव किया जाता है, तो त्रुटियों का पता लगाना बहुत आसान हो जाता है।
- ☐ D. वह प्रणाली जिसके तहत प्रत्येक बही-खाता को संतुलन के लिए बनाया जाता है, उसे स्वतःसंतुलनशील प्रणाली कहा जाता है।

Question ID : 9277592743
Status : Answered
Chosen Option : B

Q.37 _____ ' शब्द का अर्थ है- परिसंपत्ति मूल्य में अवमूल्यन, नवीनीकरण या हास करने के द्वारा किसी भी राशि को अपलेखित करना या बनाए रखना, या किसी भी ज्ञात देयता के लिए उपलब्ध कराने के द्वारा वह राशि बनाए रखना जिसे पर्याप्त सटीकता के साथ निर्धारित नहीं किया जा सकता है।

- Ans ☐ A. आय
- ☐ B. रिज़र्व
- ☐ C. हानि
- ☒ D. प्रावधान

Question ID : 9277592752
Status : Answered
Chosen Option : A

Q.38 With respect to verification, which of the following statements is INCORRECT?

- Ans ☒ A. The auditor should confirm that all assets of the company physically exist on the date of the Balance Sheet.
- ☒ B. The auditor is not required to verify whether the asset is subject to any charge or lien.
- ☒ C. The auditor has to verify that assets are in the possession of the company on the date of the Balance Sheet.
- ☒ D. The auditor should find out whether any event after the date of the Balance Sheet has affected any items of assets and liabilities.

Question ID : 9277592783
Status : Answered
Chosen Option : B

Q.39 In case of resident individuals of age 60 years or more, interest on bank fixed deposits qualifies for deduction up to _____ under Section 80TTB.

- Ans ☒ A. Rs.1,00,000
- ☒ B. Rs.75,000
- ☒ C. Rs.1,50,000
- ☒ D. Rs.50,000

Question ID : 9277592801
Status : Answered
Chosen Option : B

Q.40 Mr. X joins a job on 1-7-2019 (1 July 2019) at a monthly salary of ₹30,000. His total salary for PY 2019-20 will be _____.

- Ans ☒ A. Rs. 2,70,000
- ☒ B. Rs. 3,00,000
- ☒ C. Rs.4,20,000
- ☒ D. Rs.3,60,000

Question ID : 9277592786
Status : Answered
Chosen Option : D

Q.41 धारा 80CCE द्वारा निर्धारण वर्ष 2020-21 के लिए धारा 80C, 80CCC और 80CCD(1) के तहत कटौती की कुल राशि _____ तक सीमित है।

- Ans ☒ A. 1,50,000 रुपये
- ☒ B. 2,50,000 रुपये
- ☒ C. 2,00,000 रुपये
- ☒ D. 3,00,000 रुपये

Question ID : 9277592797
Status : Answered
Chosen Option : A

Q.42 An employee is covered under the Payment of Gratuity Act, 1972.
Salary for the purpose of calculating 15 days salary for each completed year of service shall be the _____.

- Ans ☒ A. average salary of 5 completed years
☒ B. last drawn salary
☒ C. average salary of last 6 months
☒ D. average salary of last 10 months

Question ID : 9277592787
Status : Answered
Chosen Option : D

Q.43 धारा 194C में निवासी ठेकेदारों और उप-ठेकेदारों को किए गए भुगतान से स्रोत पर कर कटौती का प्रावधान है।
पिछले वर्ष 2019-20 के लिए, ठेकेदारों को भुगतान पर धारा 194C के तहत टीडीएस की दर _____ होगी जहां
आदाता (पेई) कोई व्यक्ति या एचयूएफ़ है।

- Ans ☒ A. 2 प्रतिशत
☒ B. 3 प्रतिशत
☒ C. 4 प्रतिशत
☒ D. 1 प्रतिशत

Question ID : 9277592804
Status : Answered
Chosen Option : A

Q.44 For the Assessment Year 2020-21, standard deduction u/s 16(ia) is available from gross salary up to:

- Ans ☒ A. Rs.75,000
☒ B. Rs.40,000
☒ C. Rs.1,00,000
☒ D. Rs.50,000

Question ID : 9277592793
Status : Not Answered
Chosen Option : --

Q.45 During the Previous Year 2019-20, an assessee paid insurance premium of Rs.25,000 on the life of the spouse (policy taken on 1-4-2015 [1 April 2015]) (Assured Value Rs.2,00,000).
What is the eligible amount qualifying for deduction under Section 80C for the Assessment Year 2020-21?

- Ans ☒ A. Rs.5,000
☒ B. Rs.45,000
☒ C. Rs.20,000
☒ D. Rs.25,000

Question ID : 9277592795
Status : Answered
Chosen Option : D

Q.46 Which of the following expenses should NOT become part of cost of the asset for the purpose of calculating depreciation?

- Ans ☒ A. Initial delivery and handling costs
☒ B. Costs of site preparation
☒ C. Costs of staff training
☒ D. Installation and assembly costs

Question ID : 9277592750
Status : Answered
Chosen Option : C

Q.47 इनमें से कौन सा कथन सत्य है?

- Ans ☒ A. किसी संस्था की प्रकृति के संदर्भ में ऑडिट का मूल उद्देश्य परिवर्तित हो जाता है।
☒ B. किसी संस्था के स्वरूप के संदर्भ में ऑडिट का मूल उद्देश्य परिवर्तित हो जाता है।
☒ C. किसी संस्था के आकार के संदर्भ में ऑडिट का मूल उद्देश्य परिवर्तित हो जाता है।
☒ D. किसी संस्था की प्रकृति, आकार या स्वरूप के संदर्भ में ऑडिट के मूल उद्देश्य में कोई परिवर्तन नहीं होता है।

Question ID : 9277592771
Status : Answered
Chosen Option : D

Q.48 _____ is a piece of substantiating evidence, in the form of a written record of expenditure, disbursement, or completed transaction.

- Ans ☒ A. A voucher
☒ B. Investigation
☒ C. Accounting
☒ D. Auditing

Question ID : 9277592776
Status : Answered
Chosen Option : A

Q.49 कंपनी अधिनियम, 2013 की धारा 8 के अंतर्गत पंजीकृत गैर-लाभकारी संगठनों को _____ के अनुसार अपने आय एवं व्यय खाते और बैलेंस शीट तैयार करना आवश्यक है।

- Ans ☒ A. कंपनी अधिनियम, 2013 की अनुसूची III
☒ B. कंपनी अधिनियम, 2013 की अनुसूची IV
☒ C. कंपनी अधिनियम, 2013 की अनुसूची I
☒ D. कंपनी अधिनियम, 2013 की अनुसूची II

Question ID : 9277592745
Status : Answered
Chosen Option : B

Q.50 A sale of ₹400 made to Gautam was correctly entered in the Sales Day Book but wrongly posted to the debit of Ram as ₹40.
What is the journal entry to rectify the above error, using a Suspense Account?

- Ans ☒ A. Suspense A/c Dr. 400
To Ram A/c 40
To Gautam A/c 360
- ☒ B. Ram A/c Dr. 400
To Gautam A/c 40
To Suspense A/c 360
- ☒ C. Gautam A/c Dr. 400
Ram A/c Dr. 40
To Suspense A/c 400
- ☒ D. Gautam A/c Dr. 400
To Ram A/c 40
To Suspense A/c 360

Question ID : 9277592767
Status : Answered
Chosen Option : D

Q.51 As per _____, depreciation is the systematic allocation of the depreciable amount of an asset over its useful life.

- Ans ☒ A. Schedule II to the Companies Act, 2013
- ☒ B. Schedule I to the Companies Act, 2013
- ☒ C. Schedule IV to the Companies Act, 2013
- ☒ D. Schedule III to the Companies Act, 2013

Question ID : 9277592748
Status : Answered
Chosen Option : C

Q.52 _____ deals with 'Objectives and Scope of Audit of Financial Statements.'

- Ans ☒ A. SA 500
- ☒ B. SA 400
- ☒ C. SA 200
- ☒ D. SA 300

Question ID : 9277592770
Status : Answered
Chosen Option : B

Q.53 Which of the following statements is correct?

- Ans ☒ A. Opening Stock + Net Purchases – Direct Expenses – Closing Stock = Cost of Goods Sold
- ☒ B. Opening Stock + Net Purchases + Direct Expenses – Closing Stock = Cost of Goods Sold
- ☒ C. Opening Stock – Net Purchases + Direct Expenses + Closing Stock = Cost of Goods Sold
- ☒ D. Opening Stock + Net Purchases + Direct Expenses + Closing Stock = Cost of Goods Sold

Question ID : 9277592735
Status : Answered
Chosen Option : B

Q.54 Which of the following is NOT a characteristic of a Bill of Exchange?

- Ans ☒ A. Bill of Exchange must be in writing.
☒ B. Bill of Exchange must be dated.
☒ C. The promise to pay must always be conditional.
☒ D. Bill of Exchange should be properly stamped.

Question ID : 9277592738
Status : Answered
Chosen Option : D

Q.55 As per _____, it is compulsory for companies and firms to file a return of income or loss for every Previous Year on or before the due date in the prescribed form.

- Ans ☒ A. Section 139(1)
☒ B. Section 129(1)
☒ C. Section 159(1)
☒ D. Section 149(1)

Question ID : 9277592805
Status : Answered
Chosen Option : B

Q.56 _____ is a commonly followed method of misappropriation of cash by concealing cash shortages and covering them through recoveries from another customer.

- Ans ☒ A. Teeming and Lading
☒ B. Accounting and Investigation
☒ C. Book-keeping and Accounting
☒ D. FIFO and LIFO

Question ID : 9277592778
Status : Answered
Chosen Option : A

Q.57 इनमें से कौन सा कथन असत्य है?

- Ans ☒ A. लेखा-परीक्षा (ऑडिट) में, खातों और अभिलेखों को सत्यतापूर्ण और निष्पक्ष ढंग से सत्यापित नहीं किया जाता है।
☒ B. सामान्यतः स्वीकृत लेखा-परीक्षा सिद्धांतों के अनुसार लेखा-परीक्षा संचालित की जाती है।
☒ C. एक लेखा-परीक्षक (ऑडिटर) मुख्यतः ठोस साक्ष्य के आधार पर लेखांकन अभिलेखों का मूल्यांकन करेगा।
☒ D. सांख्यिक लेखा-परीक्षा में, कार्यक्षेत्र का निर्धारण संबंधित कानून द्वारा किया जाता है, और निजी लेखा-परीक्षा (जैसे प्रबंधन लेखा-परीक्षा) के मामले में यह क्लाइंट द्वारा किया जाता है।

Question ID : 9277592774
Status : Answered
Chosen Option : A

Q.58 यदि किसी व्यक्ति के पास पैन नहीं है और वह इस नियम (धारा 139A) में निर्दिष्ट कोई भी लेनदेन निष्पादित करता है, तो वह मुद्रित रूप में या इलेक्ट्रॉनिक रूप से ऐसे लेनदेन के विवरण देते हुए _____ में एक घोषणा करेगा।

- Ans ☒ A. फॉर्म सं. 60
☐ B. फॉर्म सं. 40
☐ C. फॉर्म सं. 70
☐ D. फॉर्म सं. 50

Question ID : 9277592806
Status : Answered
Chosen Option : A

Q.59 Where educational institution is maintained and owned by the employer, cost of such education in a similar institution in or near the locality minus amount recovered from the employee would not be regarded as a perquisite if the value of benefit per child does NOT exceed _____.

- Ans ☐ A. Rs.5,000 per month
☐ B. Rs.12,000 per month
☒ C. Rs.1,000 per month
☐ D. Rs.3,000 per month

Question ID : 9277592792
Status : Answered
Chosen Option : A

Q.60 इनमें से कौन सा कथन असत्य है?

- Ans ☐ A. त्रुटियों और घोखाधड़ी की जांच और रोकथाम द्वितीयक उद्देश्य हैं।
☐ B. लेखांकन (ऑडिटिंग) के उद्देश्यों को दो भागों में वर्गीकृत किया जा सकता है: 1. प्राथमिक उद्देश्य 2. द्वितीयक उद्देश्य।
☒ C. प्राथमिक उद्देश्यों को आकस्मिक उद्देश्य भी कहा जाता है।
☐ D. लेखा-परीक्षकों (ऑडिटर्स) का प्राथमिक उद्देश्य स्वामियों को यह रिपोर्ट करना है कि बैलेंस शीट से कंपनी की स्थिति के बारे में सही और निष्पक्ष दृष्टिकोण मिलता है या नहीं।

Question ID : 9277592781
Status : Answered
Chosen Option : D

Q.61 Which of the following statements is correct?

- Ans ☐ A. If asset of an integral foreign operation is carried at cost, cost and depreciation of tangible fixed assets is translated at average exchange rate.
☐ B. If asset of an integral foreign operation is carried at cost, cost and depreciation of tangible fixed assets is translated at closing exchange rate.
☐ C. If asset of an integral foreign operation is carried at cost, cost and depreciation of tangible fixed assets is translated at opening exchange rate.
☒ D. If asset of an integral foreign operation is carried at cost, cost and depreciation of tangible fixed assets is translated at exchange rate at the date of purchase of asset.

Question ID : 9277592755
Status : Answered
Chosen Option : D

Q.62 इनमें से कौन सत्यापन की एक तकनीक नहीं है?

- Ans ☒ A. निरीक्षण (इंस्पेक्शन)
☒ B. बिजौन्ड बजटिंग
☒ C. अवलोकन (ऑब्जर्वेशन)
☒ D. पुष्टि (कंफर्मेशन)

Question ID : 9277592784
Status : Answered
Chosen Option : B

Q.63 इनमें से कौन सा कथन असत्य है?

- Ans ☒ A. जब रोकड़ बही के अनुसार अनुकूल शेष (ड्रेबिट) के साथ बैंक समाधान विवरण शुरू किया जाता है, तो बैंक द्वारा सीधे प्राप्त आय को जोड़ा जाएगा।
☒ B. जब रोकड़ बही के अनुसार अनुकूल शेष (ड्रेबिट) के साथ बैंक समाधान विवरण शुरू किया जाता है, तो एक ग्राहक द्वारा सीधे बैंक में जमा किया गया चेक जोड़ा जाएगा।
☒ C. जब रोकड़ बही के अनुसार अनुकूल शेष (ड्रेबिट) के साथ बैंक समाधान विवरण शुरू किया जाता है, तो जारी किए गए किन्तु प्रस्तुत नहीं हुए चेक को जोड़ा जाएगा।
☒ D. जब रोकड़ बही के अनुसार अनुकूल शेष (ड्रेबिट) के साथ बैंक समाधान विवरण शुरू किया जाता है, तो जमा किए गए किन्तु समाशोधित (क्लियर) नहीं हुए चेक को जोड़ा जाएगा।

Question ID : 9277592757
Status : Answered
Chosen Option : D

Q.64 As per _____ of the Companies Act, 2013, the person appointed as an auditor of a company shall sign the auditor's report or sign or certify any other document of the company, in accordance with the provisions of Section 141(2).

- Ans ☒ A. Section 142
☒ B. Section 144
☒ C. Section 145
☒ D. Section 143

Question ID : 9277592782
Status : Answered
Chosen Option : B

Q.65 With respect to accounting for foreign branches, which of the following statements is correct?

- Ans ☒ A. For the purpose of accounting, AS 12 (revised 2003) classifies the foreign branches into two types: (a) Integral Foreign Operation, (b) Memorandum Foreign Operation.
☒ B. For the purpose of accounting, AS 16 (revised 2003) classifies the foreign branches into two types: (a) Integral Foreign Operation, (b) Memorandum Foreign Operation.
☒ C. For the purpose of accounting, AS 13 (revised 2003) classifies the foreign branches into two types: (a) Integral Foreign Operation, (b) Non-Integral Foreign Operation.
☒ D. For the purpose of accounting, AS 11 (revised 2003) classifies the foreign branches into two types: (a) Integral Foreign Operation, (b) Non-Integral Foreign Operation.

Question ID : 9277592754
Status : Answered
Chosen Option : C

Q.66 Which of the following statements is INCORRECT?

- Ans ☒ A. Audit is an intelligent and critical examination of the books of accounts of business.
- ☒ B. Audit is done with the help of vouchers, documents, information and explanation received from the clients.
- ☒ C. Audit is done by a dependent qualified person.
- ☒ D. The auditor satisfies himself with authenticity of the financial accounts prepared for a particular period.

Question ID : 9277592773
Status : Answered
Chosen Option : D

Q.67 विनिमय पत्र (बिल ऑफ एक्सचेंज) के संदर्भ में, इनमें से कौन सा कथन असत्य है?

- Ans ☒ A. एक विनिमय पत्र में, नकार सूचना (नोटिस ऑफ डिस्ऑनर) दी जानी चाहिए।
- ☒ B. स्वीकारकर्ता (एक्सेप्टर) द्वारा विनिमय पत्र का भुगतान किया जाता है
- ☒ C. विनिमय पत्र में भुगतान के लिए बिना शर्त आदेश निहित है।
- ☒ D. देनदार द्वारा विनिमय पत्र का आहरण किया जाता है

Question ID : 9277592740
Status : Answered
Chosen Option : C

Q.68 एक सरकारी कर्मचारी द्वारा प्राप्त अरूपांतरित (अन-कमिटेड) पेंशन पर _____ है।

- Ans ☒ A. पूरी तरह से छूट-प्राप्त
- ☒ B. 50 प्रतिशत तक की छूट
- ☒ C. पूरी तरह से कर योग्य
- ☒ D. 20 प्रतिशत तक की छूट

Question ID : 9277592788
Status : Answered
Chosen Option : B

Q.69 इनमें से कौन कमीशन से संबंधित एक त्रुटि नहीं है?

- Ans ☒ A. पूर्णतः चूक
- ☒ B. गलत राशि की पोस्टिंग
- ☒ C. गलत साइड पर पोस्टिंग
- ☒ D. गलत खाते में पोस्टिंग

Question ID : 9277592764
Status : Answered
Chosen Option : D

Q.70 With respect to features of Bank Reconciliation Statement (BRS), which of the following statements is INCORRECT?

- Ans ☒ A. A regular reconciliation discourages the accountant of the bank from embezzlement of funds.
- ☒ B. Any undue delay in the clearance of cheques will be shown up by BRS.
- ☒ C. BRS helps in finding out the actual or true position of the bank balance by incorporating the effect of any uncleared funds as well.
- ☒ D. BRS will bring out any errors that may have been committed in the cash book but not in the pass book.

Question ID : 9277592760
Status : Answered
Chosen Option : B

Q.71 _____ is a variation of the 'Reducing Balance Method'.

- Ans
- ☐ A. Depletion Method
 - ☐ B. Production Units Method
 - ☒ C. Sum Of Years' Digits Method
 - ☐ D. Machine Hour Method

Question ID : 9277592751
Status : Answered
Chosen Option : C

Q.72 इनमें से कौन सा कथन असत्य है?

- Ans
- ☐ A. जब रोकड़ बही के अनुसार अनुकूल शेष (डेबिट) के साथ बैंक समाधान विवरण शुरू किया जाता है, तो बैंक द्वारा लगाया गया लॉकर किराया घटाया जाता है।
 - ☐ B. जब रोकड़ बही के अनुसार अनुकूल शेष (डेबिट) के साथ बैंक समाधान विवरण शुरू किया जाता है, तो बैंक द्वारा लगाए गए बैंक शुल्क घटाए जाते हैं।
 - ☐ C. जब रोकड़ बही के अनुसार अनुकूल शेष (डेबिट) के साथ बैंक समाधान विवरण शुरू किया जाता है, तो पासबुक में गलत डेबिट को घटाया जाता है।
 - ☒ D. जब रोकड़ बही के अनुसार अनुकूल शेष (डेबिट) के साथ बैंक समाधान विवरण शुरू किया जाता है, तो रोकड़ बही में गलत क्रेडिट को घटाया जाता है।

Question ID : 9277592758
Status : Answered
Chosen Option : D

Q.73 With respect to the methods of charging goods to branches, which of the following statements is INCORRECT?

- Ans
- ☐ A. Goods may be invoiced to branches at cost.
 - ☐ B. Goods may be invoiced to branches at selling price.
 - ☐ C. Selling price method is adopted where goods would be sold at a fixed price by the branch.
 - ☒ D. Goods can never be invoiced to branches at wholesale price or arbitrage price.

Question ID : 9277592753
Status : Answered
Chosen Option : A

Q.74 Which of the following statements is INCORRECT?

- Ans
- ☐ A. As per Schedule III, a liability should be classified as current when the company does not have an unconditional right to defer settlement of the liability for at least twelve months after the reporting date.
 - ☐ B. As per Schedule III, a liability should be classified as current when it is expected to be settled in the company's normal operating cycle.
 - ☐ C. As per Schedule III, a liability should be classified as current when it is held primarily for the purpose of being traded.
 - ☒ D. As per Schedule III, a liability should be classified as current when it is due to be settled within eighteen months after the reporting date.

Question ID : 9277592769
Status : Not Answered
Chosen Option : --

Q.75 Under Section 80QQB, deduction of up to a maximum of _____ is allowed to an individual resident in India in respect of income derived as author of certain books other than text books.

- Ans ☒ A. Rs.5,00,000
☒ B. Rs.3,00,000
☒ C. Rs.4,00,000
☒ D. Rs.7,50,000

Question ID : 9277592800
Status : Answered
Chosen Option : A

