



Teachingninja.in



Latest Govt Job updates



Private Job updates



Free Mock tests available



Visit - teachingninja.in

UPSSSC
Previous Year Paper
Mandi Inspector
(30 May 2019 Shift 2)



200 Questions

Que. 1 In the question a statement is given followed by two courses of action numbered I and II. You have to assume everything in the statement to be true and on the basis of the information given in the statement, decide which of the suggested courses of action should be followed.

Statement:

A man wants to get admission in a certain unique elite club.

Courses of Action:

I: Find and complete the procedure to get entry into the club.

II: Get admission into another club.

1. Follow I.
2. Follow II.
3. Follow both I and II.
4. Follow neither I nor II.

Testbook Solution Correct Option - 1

Que. 2 Two statements referred to as Assertion (A) and Reason (R) respectively are provided. Select the most appropriate comment about the statements.

Assertion (A):

Methane gas released by some industries leads to global warming.

Reason (R):

Methane is a heavy gas and it settles in the lower regions of the atmosphere.

1. Both A and R are true and R is the correct explanation of A.
2. Both A and R are true but R is NOT the correct explanation of A.
3. A is true but R is false.
4. A is false but R is true.

Testbook Solution Correct Option - 3

Que. 3 Two statements referred to as Assertion (A) and Reason (R) respectively are provided. Select the most appropriate comment about the statements.

Assertion (A):

Railway tracks are longer during the day than at night.

Reason (R):

Days are hotter and metal expands due to heat.

1. Both A and R are true and R is the correct explanation of A.
2. Both A and R are true but R is NOT the correct explanation of A.
3. A is true but R is false
4. A is false but R is true.

Testbook Solution Correct Option - 1

Que. 4 A statement is followed by three courses of action numbered I, II and III. You have to assume everything in the statement to be true and on the basis of the information given in the statement, decide which of the suggested courses of action should be followed.

Statement:

The meteorological department has predicted that this year, the rainfall will be 20% below normal in a particular state.

Courses of Action:

I: Increase tax on water usage by 100%.

II. Reduce water allocated to swimming pools and resorts.

III. The Government should reduce electricity generation and purchase 1,00,000 water tankers.

1. Follow I.
2. Follow II.
3. Follow III.
4. Follow II and III.

Testbook Solution Correct Option - 1

Que. 5 Out of the given options, three are similar in a certain manner. However, one option is NOT like the other three. Select the option which is different from the rest

1. UST
2. QMO
3. LHJ
4. IEG

Testbook Solution Correct Option - 1

Que. 6 Out of the given options, three are similar in a certain manner. However, one option is NOT like the other three. Select the option which is different from the rest

1. Goat
2. Cat
3. Hen
4. Cow

Testbook Solution Correct Option - 3

Que. 7 Select the option that is related to the third term in the same way as the second term is related to the first term. GIK : FHJ :: OQS : ?

1. MNO
2. NPR
3. LMN
4. KMO

Testbook Solution Correct Option - 2

Que. 8 Select the option that is related to the third term in the same way as the second term is related to the first term.

0.16 : 0.4 :: 1.21 : ?

1. 0.11
2. 1.1
3. 0.011
4. 11

Testbook Solution Correct Option - 2

Que. 9 Out of the given options, three are similar in a certain manner However one option is not like the other three. Select the one that is different from the rest.

1. 216
2. 729
3. 1331
4. 324

Testbook Solution Correct Option - 4

Que. 10 In the following question, which one set of letters when sequentially placed at the gaps in the given letter series shall complete it?

a _ y z _ x _ z c _ y _

1. xbyxz
2. xacyx
3. xaycz
4. axcyz

Testbook Solution Correct Option - 1

Que. 11 Find the missing number in the following number series. -3.2, -2.3, -1.4, -0.5, ?, 1.3

1. 0.4
2. 0.5
3. 0.6
4. 0.3

Testbook Solution Correct Option - 1

Que. 12 Here are some words from an artificial language.

'zuvlim' means 'careless'

'kutlim' means 'careful' and

'kutnol' means 'helpful'

which word would mean 'helping'?

1. Finol
2. Gifkut
3. Widlim
4. Gobzuv

Testbook Solution Correct Option - 1

Que. 13 If MINARET is coded as JFKXOBQ, then how will BUY be coded?

1. YRV
2. ZBD
3. EHK
4. LOR

Testbook Solution Correct Option - 1

Que. 14 In a certain code language '+' represents '×', '÷' represents '+', '-' represents '÷' and '×' represents '-'. Find out the answer to the following question.

$$12 - 9 + 3 \div 10 \times 5 = ?$$

1. 25
2. 17
3. 9
4. 14

Testbook Solution Correct Option - 3

Que. 15 If A@B means A is the daughter of B, A#B means A is the sister of B and If A*B means A is the father of B, then what does W@X*Y#Z mean if W has one brother and one sister?

1. Z is the grandson of X.
2. Z is the granddaughter of X.
3. Z is the brother of X.
4. Z is the son of X.

Testbook Solution Correct Option - 4

Que. 16 M said to N. "You are my daughter - in - law's father - in - law's mother - in - law's son." How is N related to M?

1. N is the brother - in - law of M.
2. N is the father of M.
3. N is the son of M.
4. N is the brother of M.

Testbook Solution Correct Option - 4

Que. 17 A motorcycle is going westwards. It makes a 45° turn to its left and goes for 3 km. It then turns 90° to its left and goes for 2 km. It then makes a 180° turn. In which direction is the motorcycle going now?

1. South - east
2. North - west
3. South - west
4. North - east

Testbook Solution Correct Option - 2

Que. 18 Two bikers P and Q start from the same point. P rides 8 km northwards, then turns westwards and rides 6 km, then turns to his right and rides 4 km. Q rides 4 km westwards, then turns northwards and rides 12 km, then turns to his right and rides 9 km. Where is Q now with respect to the current position of P?

1. 11 km westwards
2. 11 km eastwards
3. 19 km eastwards
4. 19 km westwards

Testbook Solution Correct Option - 2

Que. 19 A, E, L, B, I and T are 6 points marked on a map. A is 10 km to the east of P, which is 10 km to the north of E, which is 10 km to the east of T, which is 10 km of the north of L, which is 10 km to the north of B which is 20 km to the west of I. Where is A with respect to I?

1. 30 km to the north of I
2. 20 km to the north of I

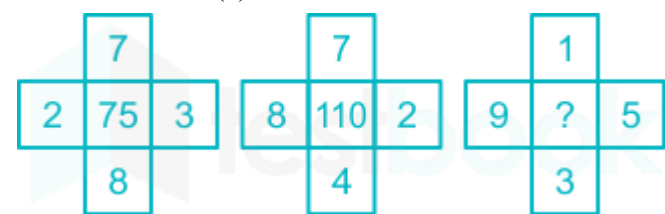
3. 30 km to the south of I
 4. 20 km to the south of I
- Testbook Solution** Correct Option - 1

Que. 20 If $16\#8 = 10$, $15\#3 = 25$, $16\#4 = 20$, then find the value of $12\#4$.

1. 16
2. 8
3. 15
4. 4

Testbook Solution Correct Option - 3

Que. 21 From the given alternatives select the number which can be placed in the place of the question mark (?)



1. 18
2. 8
3. 56
4. 64

Testbook Solution Correct Option - 3

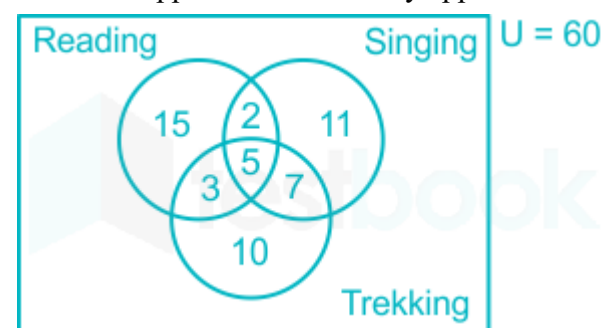
Que. 22 From the given alternatives select the number which can be placed in the place of the question mark (?)

6	2	3
5	7	4
9	8	1
?	1	6

1. 8
2. 6
3. 3
4. 2

Testbook Solution Correct Option - 4





Que. 23 The given Venn diagram shows the number of resumes and the hobbies listed in them by the applicants. How many applicants have a hobby of either singing or reading but NOT of trekking?



- 1. 28
- 2. 2
- 3. 38
- 4. 17


Testbook Solution Correct Option - 1

Que. 24 Which of the following Venn diagram best represents the relationship between Europe, Paris and France?

- 1. 
- 2. 
- 3. 
- 4. 

Testbook Solution Correct Option - 1

Que. 25 The bar graph shows average marks scored by students of four divisions of the 10th standard in two tests - Literature and Grammar. If divisions A and C have 55 students each and B and D have 45 students each, then the average of the marks scored by all the four divisions in Literature and Grammar will be _____.



- 1. 31.5
- 2. 30.5
- 3. 32
- 4. 33

Testbook Solution Correct Option - 1

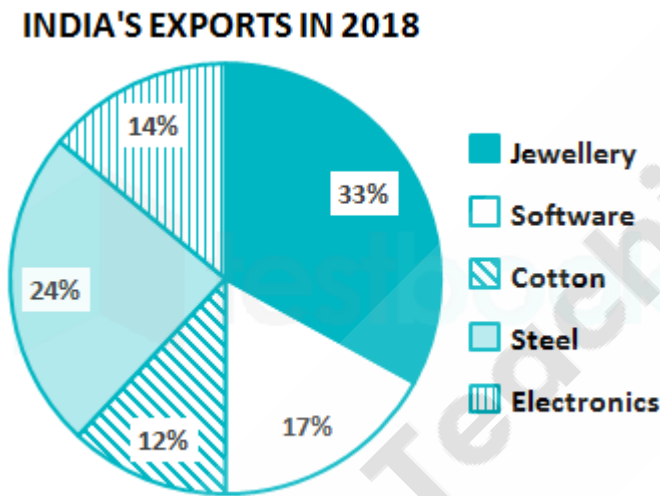
Que. 26 The given table shows the salary and bonus paid at company X by designation. What was the total bonus paid?

Designation	Number of Employees	Annual Salary in (lakh Rs.)	Bonus as percent of annual salary
Manager	2	36	50%
Executive	10	12	20%
Trainee	4	2	20%

- 1. Rs. 63.2 lakh
- 2. Rs. 58.4 Rs.
- 3. Rs. 60.8 lakh
- 4. Rs. 61.6 lakh

Testbook Solution Correct Option - 4

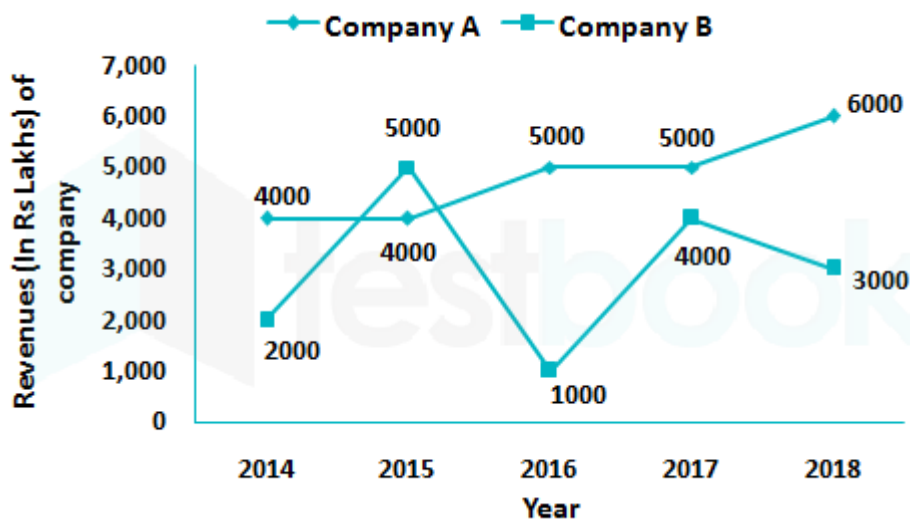
Que. 27 The pie chart shows India's exports in 2018. The export of cotton and steel was lesser than the export of jewellery and software by _____.



- 1. 20%
- 2. 28%
- 3. 24%
- 4. 32%

Testbook Solution Correct Option - 2

Que. 28 The line graph shows revenues (in lakhs rupees) of two software companies for the last five years. The last 5 years revenues of company B were greater than the last 5 years revenues of company A by _____.



1. 60%
2. 50%
3. 40%
4. 30%

Testbook Solution Correct Option - 1

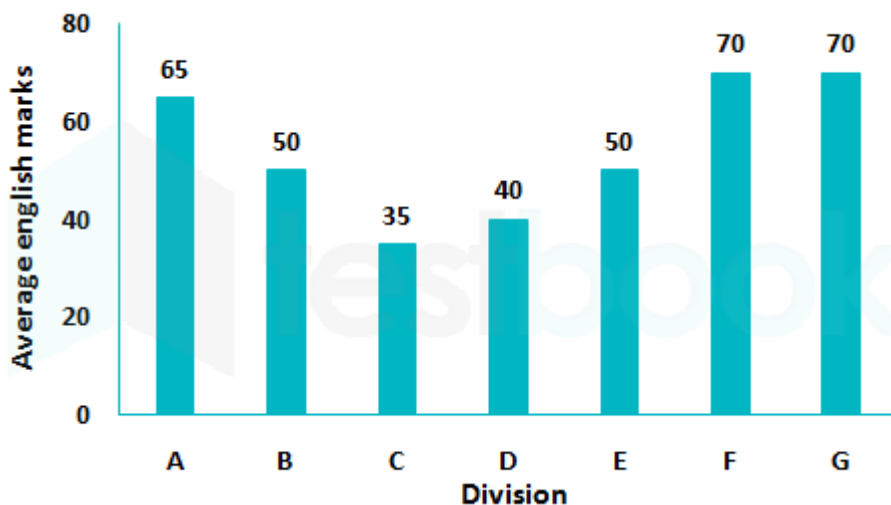
Que. 29 The histogram shows the number of residents of a housing society by age. The number of residents older than 70 years is lesser than those aged between 30 to 60 years by _____.



1. 60%
2. 50%
3. 40%
4. 30%

Testbook Solution Correct Option - 1

Que. 30 The bar graph shows the average marks scored in a 100 marks English exam by students of 7 divisions. The number of students in A, C and D divisions is 40 and the number of students in the other divisions is 50, then the average marks scored by Division A is greater than the average marks scored by Division D by _____.



1. 60.00%
2. 62.50%
3. 65.00%
4. 67.50%

Testbook Solution Correct Option - 2

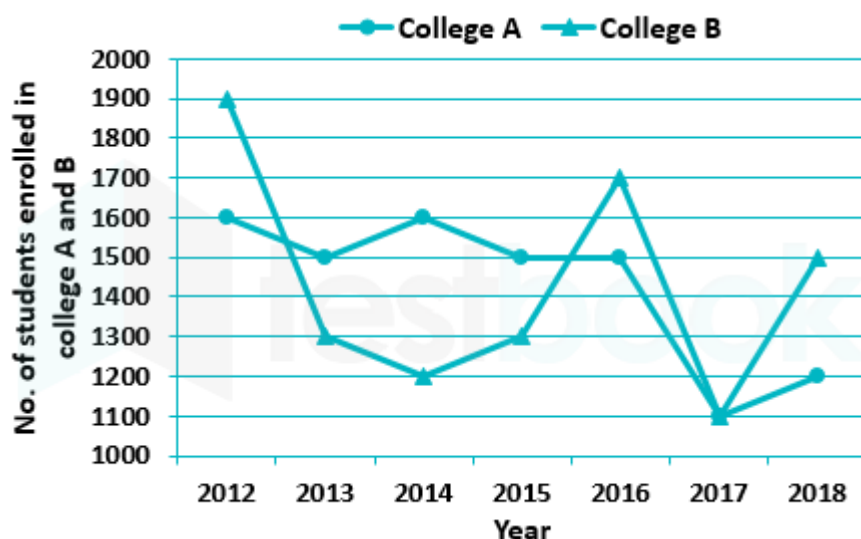
Que. 31 The given table shows the number of students and their class. Division A students are scholars who get a 25% rebate in fees. In addition, all girls students get 40% subsidy. If the fee per student a year WITHOUT rebate or subsidy is Rs. 10,000, then find the total fees collected from the students of these 6 classes for that year.

Division /Standard	Boys	Girls
Division A /Standard 9	20	40
Division B /Standard 9	40	35
Division C /Standard 10	20	20
Division A /Standard 10	40	20
Division B /Standard 10	20	40
Division C /Standard 10	20	15

1. Rs. 23.2 lakh
2. Rs. 22.6 lakh
3. Rs. 21.4 lakh
4. Rs. 20.2 lakh

Testbook Solution Correct Option - 1

Que. 32 The line graph shows the number of students enrolled in two colleges in last 7 years. If each student of college A paid Rs. 200/year as library feed and each student of college B paid Rs. 250/year as library fees in the last 7 years, then the library fees of the last 7 years collected by college B is greater than that collected by college A by _____.

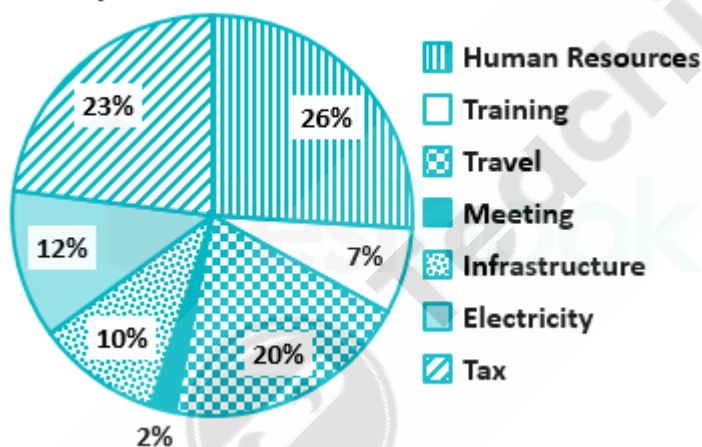


- 25%
- 20%
- 30%
- 40%

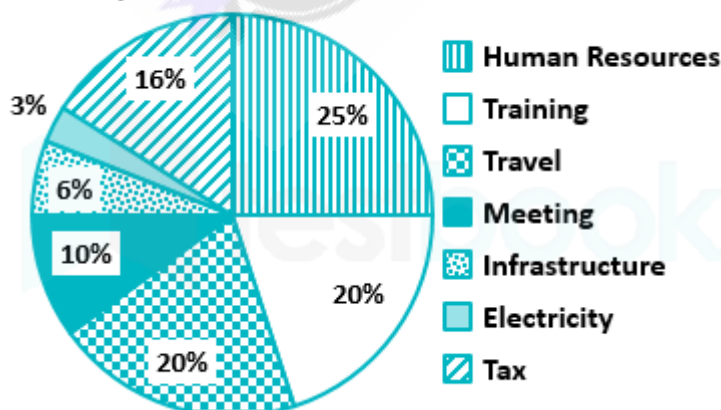
Testbook Solution Correct Option - 1

Que. 33 The pie chart shows the breakup of the total expenditure of a software company for the years 2017 and 2018. If the expenses towards building infrastructure increased by 25% in 2018 as compared to Rs. 2 Crore spent in 2017, find the expenditure of the company in 2018 towards training and travel.

Expenditure in 2017



Expenditure in 2018

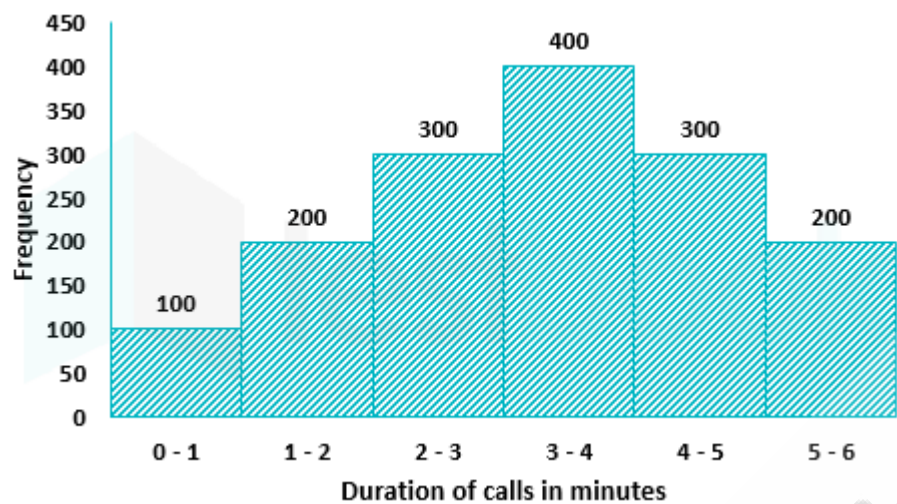


- Rs. 12.5 crore
- Rs. 16.67 crore
- Rs. 15 crore

4. Rs. 17.5 crore

Testbook Solution Correct Option - 1


Que. 34 The histogram shows the frequency distribution of the number of calls serviced by a call centre in a day by duration (in minutes) of the calls. Introduction of a new methodology will decrease the mean call time by 20%. What will the mean call time be after the new methodology is introduced?

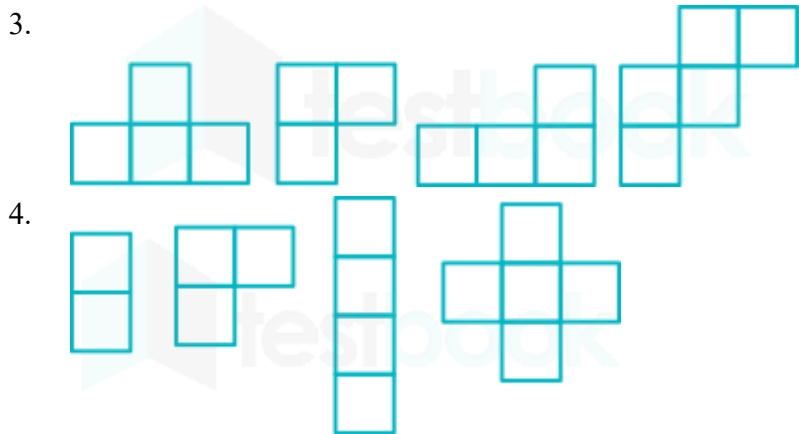


- 1. 5.3 min
- 2. 2.64 min
- 3. 6.3 min
- 4. 7.24 min

Testbook Solution Correct Option - 2

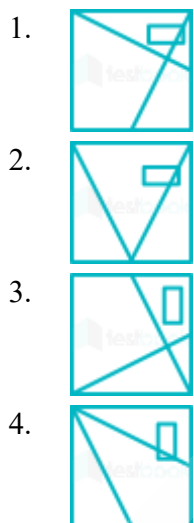
Que. 35 Which of the following answer figure patterns can be combined to make the question figure?





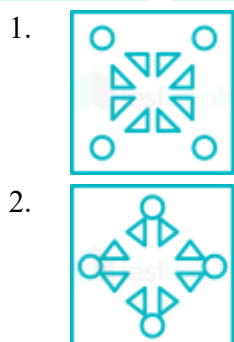
Testbook Solution Correct Option - 3

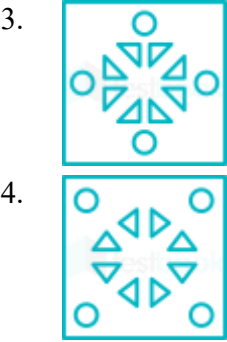
Que. 36 Which answer figure will complete the pattern in the question figure?



Testbook Solution Correct Option - 4

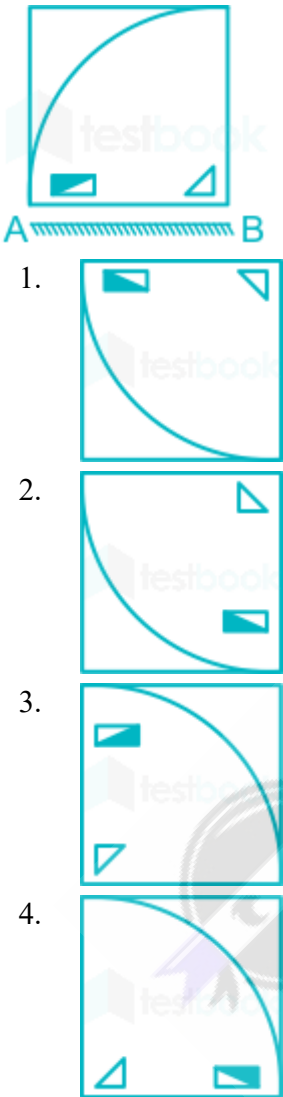
Que. 37 A piece of paper and punched as shown below in the question figures. From the given answer figures, indicate how will it appear when opened?






Testbook Solution Correct Option - 3

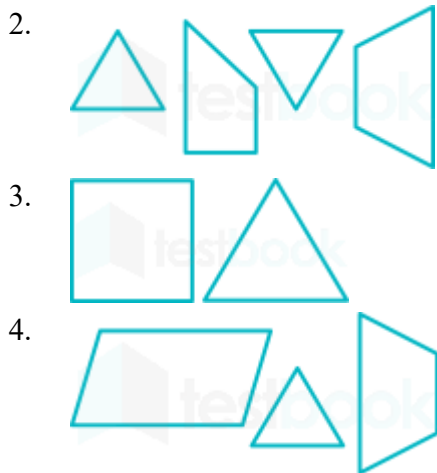
Que. 38 If a mirror is placed on line AB, then which of the answer figures will be the right mirror image of the given figure?



Testbook Solution Correct Option - 1

Que. 39 Which of the following answer figure patterns can be combined to make the question figure?





Testbook Solution Correct Option - 1

Que. 40 Out of the given option, three are similar in a certain manner. However, one option is NOT like the other three. Select the option which is different from the rest.

1.

M	X	Z
W	N	Y
P	S	V
2.

Y	V	X
R	W	Z
N	S	M
3.

X	Y	P
M	S	N
V	Z	W
4.

P	M	Y
W	S	X
N	Z	V

Testbook Solution Correct Option - 2

Que. 41 Out of the given option, three are similar in a certain manner. However, one option is NOT like the other three. Select the option which is different from the rest.

1.

△	△	△	△
△	▽	▽	▽
△	▽	△	
△	▽	▽	▽
2.

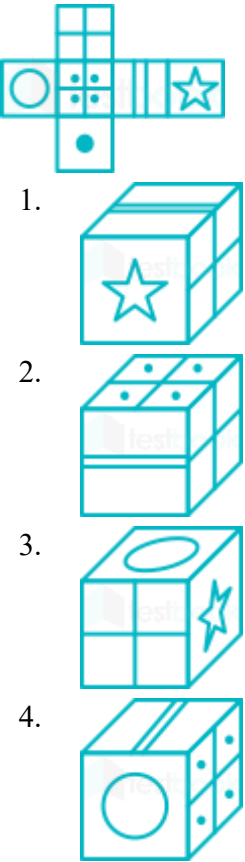
▽	▽	▽	△
△	▽	△	▽
▽	△	▽	
△	△	△	▽
3.

△	▽	▽	△
▽	▽	▽	△
△	▽	▽	
△	△	△	▽



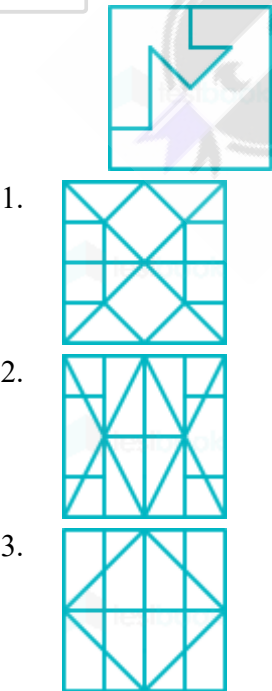
Testbook Solution Correct Option - 1

Que. 42 Which of the following cube in the answer figure CANNOT be made based on the unfolded cube in the question figure?



Testbook Solution Correct Option - 4

Que. 43 From the given option figures, Select the option in which the question figure is hidden/ embedded.





Testbook Solution Correct Option - 4

Que. 44 Which of the following answer figure completes the series in the question figure?



- 1.
- 2.
- 3.
- 4.

Testbook Solution Correct Option - 3

Que. 45 Consider the given statement and decide which of the given assumptions is/are implicit in the statement.

Statement:

‘Call us at this number if you notice the driver of this vehicle driving rashly.’ A sticker on the back of a school bus.

Assumptions:

- I. People will be able to note the number when they notice the bus is driven rashly.
- II. The authorities believe that some people will take the trouble of noting down the number and making a call when they see the bus is being driven rashly.
1. Only assumption I is implicit.
2. Only assumption II is implicit.
3. Neither I nor II is implicit.
4. Both I and II are implicit.

Testbook Solution Correct Option - 2

Que. 46 Read the given statement and conclusions carefully. Assuming that the information in the statement is true, even if they appear to be in variance with commonly known facts, select which of the conclusions logically follow(s) from the statement beyond reasonable doubt.

Statement: Data shows that 1% of the rich own 50% of the wealth in country X.

Conclusions:

I. The rich in country X are becoming richer and the poor poorer.

II. Wealth distribution in country X is unequal.

1. Only conclusion I follows.
2. Only conclusion II follows.
3. Both the conclusions follow.
4. None of the Conclusions follows.

Testbook Solution Correct Option - 2

Que. 47 Read the given statements and conclusions carefully. Assuming that the information in the statement is true, even if they appear to be in variance with commonly known facts, select which of the conclusions logically follow(s) from the statements beyond reasonable doubt.

Statement I: Some boards are wraps.

Statement II: All boards are paper.

Conclusion I: All wraps are paper.

Conclusion II: Some paper are wraps.

1. Only conclusion I follows.
2. Only conclusion II follows.
3. Both I and II follow.
4. Neither I nor II follows.

Testbook Solution Correct Option - 2

Que. 48 Read the given statement and conclusions carefully. Assuming that the information given in the statement is true, even if they appears to be in variance with commonly known facts, select which of the conclusions logically follow(s) from the statement beyond reasonable doubt.

Statement: A loss - making company has won a Rs.5 crore contract in a low - price bidding system.

Conclusion I: The company will make a profit this year as it has won a large contract.

Conclusion II: A low - price bidding system leaves no scope of a high profit margin.

1. Only conclusion I follows.
2. Only conclusion II follows.
3. Both I and II follow.
4. Neither I nor II follows.

Testbook Solution Correct Option - 4

Que. 49 Consider the given statement and decide which of the given assumptions is/are implicit in the statement.

Statement: The attendance of students of public schools has increased by 20% after the introduction of the Mid - Day Meal Scheme.

Assumptions:

I. A meal is an added incentive to go to school.

II. Attendance at public schools was below 100% before introduction of the Mid - Day Meal Scheme.

1. Only assumption I is implicit.
2. Only assumption II is implicit.
3. Neither I nor II is implicit.
4. Both I and II are implicit.

Testbook Solution Correct Option - 4

Que. 50 A statement is followed by two arguments. Decide which of the arguments is/are strong with respect to the statement.

Statement: Should speed breakers on roads be outlawed?

Argument I: No, speed breakers are a simple way to reduce vehicle speed.

Argument II: Yes, some people fail to see the speed breakers at night.

1. Only argument I is strong.
2. Only argument II is strong.
3. Neither I nor II is strong.
4. Both I and II are strong.

Testbook Solution Correct Option - 1

Que. 51 After the battle of Buxar the East India Company agreed to pay _____ every year to the Mughal Emperor.

1. Rs. 82 lakh
2. Rs. 26 lakh
3. Rs. 44 lakh
4. Rs. 68 lakh

Testbook Solution Correct Option - 2

Que. 52 The Quit India Movement, or the 'August Movement' was movement launched at the _____ session of all All India Congress Committee by Mahatma Gandhi on 8 August 1942.

1. Surat
2. Bombay
3. Bhopal
4. Ujjain

Testbook Solution Correct Option - 2

Que. 53 The Bardoli satyagraha of 1928 was led by _____.

1. Lala Lajpat Rai
2. Sardar Vallabhai Patel
3. Jawaharlal Nehru
4. Bipin Chandra Pal

Testbook Solution Correct Option - 2

Que. 54 India has a land frontier of _____.

1. 13,400 km
2. 11,600 km
3. 9,800 km
4. 15,200 km

Testbook Solution Correct Option - 4

Que. 55 Which of the following rivers flows through the Thar desert?

1. Savitri
2. Mutha
3. Luni

4. Girna

Testbook Solution Correct Option - 3

Que. 56 The highest point in North Andaman is the _____ peak at a height of 732 m.

1. Deomali
2. Karoh
3. Saddle
4. Betlingchhip

Testbook Solution Correct Option - 3

Que. 57 Which state has a total installed capacity of 12.3 GW electricity production using renewable sources, as of march 2018?

1. Kerala
2. Karnataka
3. Himachal Pradesh
4. Assam

Testbook Solution Correct Option - 2

Que. 58 The Malanjkhand belt of Balaghat and Khetri - Singana belt of Jhunjhun are important

1. Iron
2. Aluminium
3. Silver
4. Copper

Testbook Solution Correct Option - 4

Que. 59 The _____ tribes are the major tribes of West Bengal and are mostly seen in the districts of Bankura and Purulia.

1. Munda
2. Chenchu
3. Santhal
4. Jangil

Testbook Solution Correct Option - 3

Que. 60 Kodava is an endangered Dravidian language and the original language of the Kodagu district southern _____.

1. Tamil Nadu
2. Karnataka
3. Andhra Pradesh
4. Kerala

Testbook Solution Correct Option - 2

Que. 61 Which of the following countries does NOT have a cost on the Mediterranean Sea?

1. Portugal
2. France
3. Belgium

4. Greece

Testbook Solution Correct Option - 1

Que. 62 Which of the following is an Alpine country?

1. Poland
2. Italy
3. Spain
4. Greece

Testbook Solution Correct Option - 2

Que. 63 Panchayati Raj system was formalised in the year _____ Amendment to the Indian Constitution.

1. 1978 by the 44th
2. 1989 by the 61th
3. 1975 by the 36th
4. 1992 by the 73th

Testbook Solution Correct Option - 4

Que. 64 On August 27, 2009, the Union Cabinet of the Government of India approved _____ reservation for women in Panchayati Raj Institutions (PRI).

1. 30%
2. 40%
3. 50%
4. 60%

Testbook Solution Correct Option - 3

Que. 65 Enacted on 7 September 2005, the Mahatma Gandhi National Rural Employment Guarantee Act (MGNREGA) in India entitles, by demand, every rural household to a minimum of _____ of paid work each year at minimum wage.

1. 120 days
2. 150 days
3. 180 days
4. 100 days

Testbook Solution Correct Option - 4

Que. 66 The Second Administrative Reforms Commission (ARC) was constituted on 31 August 2005, as a Commission of Inquiry, under the Chairmanship of _____.

1. Lalji Tandon
2. Satya Pal Malik
3. Veerappa Moily
4. Padmanabha Acharya

Testbook Solution Correct Option - 3

Que. 67 The Constitution ensures the security of the tenure of the CEC and Election Commissioners. They are appointed for a six-year term or continue till the age of _____, whichever is earlier.

1. 60

2. 65
3. 62
4. 67

Testbook Solution Correct Option - 2

Que. 68 Which of the following is one of the powers of Rajya Sabha?

1. It makes laws on matters included in the Union List and the Concurrent List. It can introduce and enact money and non money bills.
2. It approves proposals for taxation, budgets and annual financial statements.
3. It considers and approves non money bills and suggests amendments to money bills.
4. It approves the proclamation of emergency.

Testbook Solution Correct Option - 1

Que. 69 The _____ art is practiced in the Mithila region of the Indian subcontinent.

1. Madhubani
2. Patachitra
3. Kalighat
4. Tikuli

Testbook Solution Correct Option - 1

Que. 70 India as a whole has an approximate population density of _____ people per square kilometre.

1. 416
2. 325
3. 573
4. 289

Testbook Solution Correct Option - 2

Que. 71 India is at rank ____ in the World Bank's Ease of doing business rankings as on November 2018.

1. 77
2. 91
3. 82
4. 108

Testbook Solution Correct Option - 1

Que. 72 The _____ principle of accounting assumes the business will continue to exist and function with no defined end date.

1. Economic entity
2. Conservation
3. Going concern
4. Cost

Testbook Solution Correct Option - 3

Que. 73 A _____ account is a general ledger account relating to Assets and Liabilities other than people accounts.

1. Personal

2. Cash
3. real
4. Credit

Testbook Solution Correct Option - 3

Que. 74 In January 2019, the Defence Acquisition Council has approved Rs. 40,000 crore worth proposal to built six bigger submarines for the navy and 5,000 anti-tank _____ missiles for the army.

1. Nag
2. Helina
3. Amogha - I
4. Milan 2T

Testbook Solution Correct Option - 4

Que. 75 As per Transparency International's Corruption Perception Index 2018, which country is the world's least corrupt country scoring 88 out of 100 points?

1. Canada
2. Germany
3. Iceland
4. Denmark

Testbook Solution Correct Option - 4

Que. 76 The first - ever International Day of _____ was celebrated on 24 January 2019 as per the resolution passed by the United Nations General Assembly.

1. the UN Peacekeeping Force
2. Education
3. Forests
4. Blood Donors

Testbook Solution Correct Option - 2

Que. 77 In January 2019, India's highest peacetime gallantry honour, the Ashoka Chakra was awarded to Lance Naik _____ posthumously.

1. Nazir Wani
2. Ramaswamy Paraneswaran
3. Karam Singh
4. Jadunath Singh

Testbook Solution Correct Option - 1

Que. 78 Name the winner of the Women's Singles Australian Open 2019.

1. Simona Halep
2. Sloane Stephens
3. Naomi Osaka
4. Jeiena Ostapenko

Testbook Solution Correct Option - 3

Que. 79

In India, subsidy for the main nitrogenous fertilizer urea, is regulated through a policy wherein it is provided to farmers at a statutory maximum retail price of _____ per tonne (5% extra for the neem coating).

1. Rs. 4730
2. Rs. 3950
3. Rs. 2480
4. Rs. 5360

Testbook Solution Correct Option - 4

Que. 80 The Himsagar variety of mango is from which state?

1. Gujarat
2. West Bengal
3. Maharashtra
4. Uttar Pradesh

Testbook Solution Correct Option - 2

Que. 81 Himachal Pradesh is famous for the production of which variety of mangoes?

1. Mulgoba
2. Badami
3. Chaunsa
4. Kesar

Testbook Solution Correct Option - 3

Que. 82 A/An _____ is a programme or a computer that connects to and requests information from a server.

1. Access
2. Bridge
3. Client
4. Captcha

Testbook Solution Correct Option - 3

Que. 83 The process used to remove magnetism from a cathoderay tube (CRT) computer monitor is called _____.

1. Deworm
2. Dope
3. Degauss
4. Bounce

Testbook Solution Correct Option - 3

Que. 84 The Windows sound file has the extension _____.

1. .wav
2. .sit
3. .wpd
4. .dif

Testbook Solution Correct Option - 1

Que. 85 The Lion Capital of Ashoka was on a pillar in _____.

1. Kannauj
2. Gautam Buddha Nagar
3. Sambhal
4. Sarnath

Testbook Solution Correct Option - 4

Que. 86 Which dance form is associated with the worship of Radha and Krishna, and involves ladies carrying oil lamps on their heads?

1. Chholiya
2. Chhau
3. Charkula
4. Dumhal

Testbook Solution Correct Option - 3

Que. 87 The Auraiya district in southern Uttar Pradesh is a major producer of _____.

1. Jaggery
2. Honey
3. Pure desi ghee
4. asafoetida (hing)

Testbook Solution Correct Option - 3

Que. 88 A naturally growing perennial grass, known as '_____' in the local dialect, is found in the low lands of the Amethi district. Locals are engaged in making various types of decorative and household products from this grass known as moonj products.

1. Bahia
2. Sarpat
3. Doob
4. Durva

Testbook Solution Correct Option - 2

Que. 89 Which of the following districts of Uttar Pradesh is world famous for the production and exports of carpets, which have distinctive and outstanding designs?

1. Mirzapur
2. Ghaziabad
3. Unnao
4. Bhadohi

Testbook Solution Correct Option - 4

Que. 90 Name the famous Indian tabla player born in Kabir Chaura, Varanasi, Uttar Pradesh, who belonged to the Benares Gharana?

1. Alla Rakha
2. Ahmed Jan Thirkwa
3. Shivkumar Sharma
4. Pandit Kishan Maharaj

Testbook Solution Correct Option - 4

Que. 91 Which saint is regarded as an incarnation of Valmiki, the author of Ramayana?

1. Goswami Tulsidas
2. Ramanand Swami
3. Sant Ravidas
4. Swami Karpatri

Testbook Solution Correct Option - 1

Que. 92 Name the folk music of Uttar Pradesh mostly sung during the monsoon months and which is also reflective of the mood of separation.

1. Cahiti
2. Giddha
3. Kajari
4. Kaharwa

Testbook Solution Correct Option - 3

Que. 93 Which university established in 1966 in Kanpur is named after a Maratha king?

1. Rajaram Chhatrapati University
2. Chhatrapati Shivaji Maharaj University
3. Chhatrapati Shahu Ji Maharaj University
4. Peshwa Balaji Bajirao University

Testbook Solution Correct Option - 3

Que. 94 Kushinagar, which has the _____, is a popular tourist destination for Buddhists.

1. Deer park
2. Mulgandha Kuti Vihar
3. Tivetan Temple
4. Ramabhar Stupa

Testbook Solution Correct Option - 4

Que. 95 The Partition of Bengal (1905), was carried out by the British Viceroy in India, Lord _____.

1. Minto
2. Curzon
3. Chelmsford
4. Irwin

Testbook Solution Correct Option - 2

Que. 96 The _____ Pact was an agreement reached between the Indian National Congress and the Muslim League at the Joint session of both the parties in December 1916.

1. lucknow
2. Kanpur
3. Allahabad
4. Meerut

Testbook Solution Correct Option - 1

Que. 97 Baldev Singh, a member of the Interim Government, the first government of independent India was the head, of _____.

1. Defence
2. Education
3. Railways
4. Finance

Testbook Solution Correct Option - 1

Que. 98 At the Parliament of World Religions in _____ (1893), Swami Vivekananda spoke about Hindu religion at length.

1. New York
2. Chicago
3. Washington DC
4. Los Angeles

Testbook Solution Correct Option - 2

Que. 99 The Hindu Widows Remarriage Act, 1856, also known as Act XV, 1856, enacted on 26 July 1856, was passed by Lord _____.

1. Hardinge
2. Auckland
3. Canning
4. Metcalfe

Testbook Solution Correct Option - 3

Que. 100 In 1891, BM Malabari's efforts bore fruit when the age of the Age of Consent was enacted which prohibited the marriage of a girl child the age of _____.

1. 14 years
2. 12 years
3. 18 years
4. 16 years

Testbook Solution Correct Option - 2

Que. 101 A highly recommended food item, broccoli belongs to the family of which vegetable?

1. Spinach
2. Brassicaceae
3. Bottle gourd
4. Beetroot

Testbook Solution Correct Option - 2

Que. 102 _____ is essential for blood coagulation.

1. Folic acid
2. Potassium
3. Vitamin K
4. Iron

Testbook Solution Correct Option - 3

Que. 103 _____ anemia is a life - threatening condition when a person's body doesn't produce enough blood cells.

1. Aplastic
2. Carrion
3. Helico
4. Lassa

Testbook Solution Correct Option - 1

Que. 104 Normal levels of white blood cells in blood is _____ thousands / mm³.

1. 0.5 - 5
2. 4.5 - 10
3. 10 - 14.5
4. 15 - 19.5

Testbook Solution Correct Option - 2

Que. 105 _____ are an excellent and an inexpensive protein source and a great alternative for low - calorie vegetarian meals.

1. Green leafy vegetables
2. Berries
3. Tubers
4. Beans

Testbook Solution Correct Option - 4

Que. 106 During the second phase of detoxification in the liver, _____ attach themselves to waste molecules and escort them out of the body.

1. Fats
2. Carbohydrates
3. Phytonutrients
4. Proteins

Testbook Solution Correct Option - 1

Que. 107 In India, 45% of the total irrigation and _____ of domestic water comes from ground water reserve.

1. 60%
2. 40%
3. 20%
4. 80%

Testbook Solution Correct Option - 4

Que. 108 18 karat gold will contain what percent of other metals like copper or silver?

1. 18%
2. 25%
3. 2%

4. 5%

Testbook Solution Correct Option - 2

Que. 109 The ratio of the number of premolar teeth to molar teeth in humans is _____.

1. 2 : 3
2. 1 : 2
3. 2 : 1
4. 3 : 2

Testbook Solution Correct Option - 1

Que. 110 Which of the following gases is NOT a greenhouse gas?

1. Methane
2. Nitrogen
3. Water vapour
4. Carbon dioxide

Testbook Solution Correct Option - 2

Que. 111 Which of the following types of coal has the most carbon content?

1. Bituminous
2. Lignite
3. Peat
4. Anthracite

Testbook Solution Correct Option - 4

Que. 112 When water is added to baking powder _____ gas is released.

1. Oxygen
2. Carbon dioxide
3. Nitrogen
4. Hydrogen

Testbook Solution Correct Option - 2

Que. 113 Which of the following substances is coated on the surface of a NON - stick utensil?

1. Nylon
2. Bakelite
3. Polyvinyl chloride
4. Teflon

Testbook Solution Correct Option - 4

Que. 114 Which property of a sound wave decides its pitch?

1. Amplitude
2. Shape of the wave
3. Frequency
4. Loudness

Testbook Solution Correct Option - 3

Que. 115 Graphite is primarily made of which of the following elements?

1. Silicon
2. Iron
3. Carbon
4. Copper

Testbook Solution Correct Option - 3

Que. 116 The hormone insulin is produced by which gland in our body?

1. Pancreas
2. Liver
3. Thyroid
4. Adrenal

Testbook Solution Correct Option - 1

Que. 117 Plaster of Paris consists of a fine white powder of _____ sulphate.

1. Sodium
2. Calcium
3. Magnesium
4. Barium

Testbook Solution Correct Option - 2

Que. 118 Chandrayan - 1, India's first mission to Moon was launched successfully on _____ from, Sriharikota.

1. 22 October, 2008
2. 13 December, 2009
3. 30 March, 2010
4. 7 July, 2011

Testbook Solution Correct Option - 1

Que. 119 _____ is the newest Indian base in Antarctica that was commissioned in 2015, constructed out of 134 shipping containers.

1. Kailash
2. Swabhimaan
3. Sadbhavna
4. Bharati

Testbook Solution Correct Option - 4

Que. 120 India's first nuclear submarine INS Arihant was built at the Navy Shipbuilding Centre at _____.

1. Kochi
2. Hazira
3. Vishakhapatnam
4. Pipavav

Testbook Solution Correct Option - 3

Que. 121 The range of India's supersonic missile, BrahMos was initially capped at 290 km as per obligations of Missile Technology Control Regime (MTCR) since India's entry into this elite club, its range has been extended to _____, as per July 2018 test fire reports.

1. 350 km
2. 450 km
3. 550 km
4. 650 km

Testbook Solution Correct Option - 2

Que. 122 A fasting blood sugar level from _____ mg/dL is considered prediabetes.

1. 75 to 100
2. 50 to 75
3. 100 to 125
4. 25 to 50

Testbook Solution Correct Option - 3

Que. 123 Coconuts are loaded with fiber and powerful fatty acids called medium - chain _____.

1. omega - 3 fatty acids
2. trans fats
3. polyunsaturated fats
4. Triglycerides

Testbook Solution Correct Option - 4

Que. 124 Vitamin C deficiency results in a disease called _____.

1. Scurvy
2. Beriberi
3. Pellagra
4. night blindness

Testbook Solution Correct Option - 1

Que. 125 Berries like cranberries, strawberries and raspberries are rich in which dietary mineral?

1. Iron
2. Manganese
3. Iodine
4. Calcium

Testbook Solution Correct Option - 2

Que. 126 To travel 624 km, train A takes 6 hours more than train B. If however, the speed of train A is doubled, it would take 5 hours less than train B. The speed of the train B is:

1. 39 km/h
2. 56.7 km/h
3. 21.3 km/h
4. 74.5 km/h

Testbook Solution Correct Option - 1

Que. 127 On a certain principal if the simple interest for two years is Rs. 3,200 and compound interest for the two years is Rs. 3,472, what is the rate of interest?

1. 8.50%
2. 30%
3. 17%
4. 22.50%

Testbook Solution Correct Option - 3

Que. 128 If $\frac{x}{2} - 5 < \frac{x}{2} - 4$, then find the biggest value of x if x is even.

1. 4
2. 6
3. 2
4. 8

Testbook Solution Correct Option - 4

Que. 129 Select the most appropriate option to solve the equation: $6719^2 - 3281^2 = ?$

1. 27440000
2. 26620000
3. 34380000
4. 25540000

Testbook Solution Correct Option - 3

Que. 130 If $x^4 - 2x^2 - 3 = 0$, find one of the values of x.

1. $\sqrt{3}$
2. 3
3. 5
4. $\sqrt{5}$

Testbook Solution Correct Option - 1

Que. 131 Which of the following is the correct algebraic identity?

1. $bc(b - c) + ca(c - a) + ab(a - b) = (a - b)(b - c)(c - a)$
2. $bc(b - c) + ca(c - a) + ab(a - b) = -(a - b)(b - c)(c - a)$
3. $bc(b - c) + ca(c - a) + ab(a - b) = -2(a - b)(b - c)(c - a)$
4. $bc(b - c) + ca(c - a) + ab(a - b) = 2(a - b)(b - c)(c - a)$

Testbook Solution Correct Option - 2

Que. 132 The length of the diagonal and the breadth of a rectangle are 12.5 cm and 3.5 cm respectively. Find its perimeter.

1. 32 cm
2. 33 cm
3. 34 cm
4. 31 cm

Testbook Solution Correct Option - 4

Que. 133 What is the measure of an interior angle of a regular polygon of 24 sides?

1. 124°
2. 165°
3. 156°
4. 155°

Testbook Solution Correct Option - 2

Que. 134 Find the area of a triangle of sides 41 cm, 15 cm and 28 cm by using Heron's formula.

1. 112 cm^2
2. 132 cm^2
3. 126 cm^2
4. 144 cm^2

Testbook Solution Correct Option - 3

Que. 135 Find the volume of a right circular cylinder of diameter 42 cm and height 14 cm?

1. $18,926 \text{ cm}^3$
2. $17,308 \text{ cm}^3$
3. $19,404 \text{ cm}^3$
4. $16,326 \text{ cm}^3$

Testbook Solution Correct Option - 3

Que. 136 Find the surface area of a sphere of diameter 7 cm?

1. 148 cm^2
2. 132 cm^2
3. 154 cm^2
4. 166 cm^2

Testbook Solution Correct Option - 3

Que. 137 The curved surface area and the slant height of a right circular cone are 363 cm^2 and 11 cm respectively. Find the diameter.

1. 31.5 cm
2. 21 cm
3. 14 cm
4. 17.5 cm

Testbook Solution Correct Option - 2

Que. 138 Find the curved surface area of a hemisphere of diameter 7 cm.

1. 105.5 cm
2. 99 cm
3. 70 cm
4. 77 cm

Testbook Solution Correct Option - 4

Que. 139 Select the most appropriate option to solve the equation:

$$\frac{\sqrt{3} \sin 66^\circ}{\cos 24^\circ} - \frac{2 \cot 55^\circ}{\tan 35^\circ} = ?$$

1. $\sqrt{3} - 2$
2. $\frac{\sqrt{3}}{-2} - 1$
3. $\frac{1}{\sqrt{3}} - 1$
4. $\sqrt{3} - \frac{1}{2}$

Testbook Solution Correct Option - 1

Que. 140 Find the height of a tree, if by walking away from it 10 m in a horizontal line through its base the angular elevation of its top changes from 60° to 30°

1. $5\sqrt{3}$ m
2. $6\sqrt{3}$ m
3. $4\sqrt{3}$ m
4. $3\sqrt{3}$ m

Testbook Solution Correct Option - 1

Que. 141 Select the most appropriate option to solve the equation:

$$(1 - 2\cos^2 A)/(\sin A \times \cos A) = ?$$

1. $\tan A + \cot A$
2. $\tan A - \cot A$
3. $\sec A - \operatorname{cosec} A$
4. $\sec A + \operatorname{cosec} A$

Testbook Solution Correct Option - 2

Que. 142 Select the most appropriate option to solve the equation:

$$625 \times 0.032 - 2 \times (1.44/1.6) = ?$$

1. 9.1
2. 27.3
3. 18.2
4. 36.4

Testbook Solution Correct Option - 3

Que. 143 Find the remainder when 75,382 is divided by 33.

1. 19
2. 3
3. 13
4. 10

Testbook Solution Correct Option - 4

Que. 144 The HCF of two numbers is 23 and the other two factors of their LCM are 29 and 49. The smaller of these number is _____.

1. 667
2. 619
3. 723

4. 741

Testbook Solution Correct Option - 1

Que. 145 Which of the following numbers is NOT a prime number?

1. 281
2. 409
3. 541
4. 437

Testbook Solution Correct Option - 4

Que. 146 If a retailer sells a shirt at Rs. 2,350 and he makes a 6% loss, at what price should he sell it make a 6% profit?

1. Rs. 2,450
2. Rs. 2,550
3. Rs. 2,750
4. Rs. 2,650

Testbook Solution Correct Option - 4

Que. 147 Of the 5 numbers whose mean is 105, the first is $\frac{2}{5}$ times the sum of the other 4. The first number is:

1. 135
2. 140
3. 145
4. 150

Testbook Solution Correct Option - 4

Que. 148 If a merchant offers a discount of 60% on the list price of an item, then he makes a loss of 5%. What percentage profit will he make if he sells that item at a discount of 20% of the list price?

1. 20% profit
2. 4% loss
3. 14% profit
4. 90% profit

Testbook Solution Correct Option - 4

Que. 149 Some candidates were selected by a company after the hiring process. The ratio of selected to unselected was 4 : 1. If 70 less had applied and 30 less selected, the ratio of selected to unselected would have been 6 : 1. How many candidates were selected?

1. 105
2. 210
3. 420
4. 315

Testbook Solution Correct Option - 3

Que. 150 A does double the work of B in the same time. If they work together, they can dig a canal in 16 days. How many days would B take if he had to dig the same canal working alone?

1. 24 days
2. 36 days
3. 60 days
4. 48 days

Testbook Solution Correct Option - 4

Que. 151 निम्नलिखित प्रश्न में, चार विकल्पों में से, उस सही विकल्प का चयन करें जो दिए गए वाक्य के अंग्रेजी अनुवाद का सही विकल्प है।

वैसे देखा जाए तो मोबाईल फोन निश्चित रूप में वरदान है।

1. If we think about it, the mobile phone is definitely an anthema.
2. If we think about it, the mobile phone is definitely NOT a boon.
3. If we think about it, the mobile phone is definitely a boon.
4. If we think about it, the telephone is definitely a boon.

Testbook Solution Correct Option - 3

Que. 152 सही विकल्प का चयन करें जो दिए गए वाक्य का सही अंग्रेजी अनुवाद है।

सब भारतवासी एक होकर डट कर विपत्ति का सामना करते हैं।

1. Some Indians face the worst crisis.
2. All the Indians stand united and fight crisis.
3. All the Indian face the worst crisis.
4. All the Indians stand united and face the good crisis.

Testbook Solution Correct Option - 2

Que. 153 सही विकल्प का चयन करें जो दिए गए वाक्य का सही अंग्रेजी अनुवाद है।

कुछ विदेशी पक्षियों को सैर करने का बहुत शौक होता है।

1. Some foreign birds are very fond of traveling.
2. All foreign birds are very fond of traveling.
3. Some Indian birds are very fond of traveling.
4. Some foreign birds are NOT that fond of traveling.

Testbook Solution Correct Option - 1

Que. 154 सही विकल्प का चयन करें जो दिए गए वाक्य का सही अंग्रेजी अनुवाद है।

हमारे कलाकारों ने पत्थरों के द्वारा यह सन्देश दिया।

1. Some people gave this message though the stones.
2. Our artists took this message through the stones.
3. Our artists gave this message through the stones.
4. Our artists given that message through the stones.

Testbook Solution Correct Option - 3

Que. 155 सही विकल्प का चयन करें जो वाक्यांशों के लिए एक शब्द है।

आदि से अंत तक।

1. अनादि
2. आद्योपात

3. समकालीन
4. समीचीन

Testbook Solution Correct Option - 2

Que. 156 सही विकल्प का चयन करे जो वाक्यांशों के लिए एक शब्द है।

जो सब कुछ जानता है।

1. सर्वज्ञ
2. सर्वस्व
3. सर्वत्र
4. ज्ञानी

Testbook Solution Correct Option - 1

Que. 157 निम्नलिखित प्रश्न में, चार विकल्पों में से, उस सही विकल्प का चयन करें जो रेखांकित शब्द के लिए उचित विकल्प है।

बूढ़े माता-पिता का एकमात्र सहारा उनका बेटा ही था।

1. अविलंब
2. अवलंब
3. अवसर
4. अमूल्य

Testbook Solution Correct Option - 2

Que. 158 उस विकल्प का चयन करें जो दिए गए शब्द का सही समानार्थी शब्द है।

हिरण

1. कुरंगम
2. तरंग
3. नंदन
4. अंबुद

Testbook Solution Correct Option - 1

Que. 159 'कोई' शब्द में कौन से विशेषण का बोध होता है?

1. परिणामवाचक विशेषण
2. सार्वनामिक विशेषण
3. मूलावस्था
4. उत्तरावस्था

Testbook Solution Correct Option - 2

Que. 160 उस विकल्प का चयन करें जो दिए गए शब्द का तद्भव रूप है।

अट्टालिका

1. अटारी
2. कमरा
3. हँसी

4. कमराक

Testbook Solution Correct Option - 1

Que. 161 भाववाचक संज्ञा कितने प्रकार के शब्दों से बनती है?

1. चार प्रकार के
2. तीन प्रकार के
3. पाँच प्रकार के
4. छह प्रकार के

Testbook Solution Correct Option - 3

Que. 162 उस विकल्प का चयन करें जो दिए गए वाक्य में सर्वनाम के भेद का सही विकल्प है।
घनश्याम ने अपने आप कार्यक्रम की पूरी तैयारी कर ली।

1. संबंधवाचक
2. उत्तम पुरुष
3. मध्यम पुरुष
4. निजवाचक

Testbook Solution Correct Option - 4

Que. 163 उस विकल्प का चयन करें जो विशेषण का भेद है।

उस घर में मेरा दोस्त रहता है।

1. सार्वनामिक
2. निश्चित परिमाण वाचक
3. निश्चित संख्यावाचक
4. गुणवाचक

Testbook Solution Correct Option - 1

Que. 164 उस विकल्प का चयन करें जो दिए गए वाक्य में क्रिया के भेद वाला सही विकल्प है।

रोहन चाय पीकर बैठ गया।

1. प्रेरणार्थक
2. नामघातु
3. पूर्वकालिक
4. संयुक्त

Testbook Solution Correct Option - 3

Que. 165 किस स्वर के उच्चारण में दीर्घ स्वर से भी अधिक समय लगता है?

1. अनुस्वार
2. अनुनासिक
3. ह्रस्व
4. प्लुत

Testbook Solution Correct Option - 4

Que. 166 प्रत्येक शब्द की वर्तनी के सभी वर्णों को उसी क्रम में अलग-अलग दिखाना क्या कहलाता है?

1. वर्ण संयोजन
2. वर्ण - विच्छेद
3. संधि
4. संधि - विच्छेद

Testbook Solution Correct Option - 2

Que. 167 वर्णमाला में स्पर्श व्यंजनों की संख्या कितनी है?

1. 25
2. 30
3. 20
4. 35

Testbook Solution Correct Option - 1

Que. 168 स्वर ए-ऐ का उच्चारण स्थान कौन सा है?

1. कंठोष्ठ
2. दंतोष्ठ
3. कंठ तालव्य
4. ओष्ठ

Testbook Solution Correct Option - 3

Que. 169 हिंदी शब्दकोष में 'क' के बाद कौन सा व्यंजन दिखाई देता है?

1. ज्ञ
2. च
3. ख
4. क्ष

Testbook Solution Correct Option - 3

Que. 170 अपने कार्यालय से अनुभव प्रमाण-पत्र लेने के लिए किसे आवेदन-पत्र लिखेंगे?

1. संस्थापक महोदय
2. व्यवस्थापक महोदय
3. प्रचारक महोदय
4. संपादक महोदय

Testbook Solution Correct Option - 2

Que. 171 दैनिक हिन्दुस्तान में संवाददाता के पद के लिए किसे आवेदन-पत्र लिखेंगे?

1. कार्यकारी महोदय
2. प्रचारक महोदय
3. संपादक महोदय
4. अधिकारी महोदय

Testbook Solution Correct Option - 3

Que. 172 बस स्टैंड के पास आवारा लडकों के व्यवहार को बताते हुए तथा उनके खिलाफ छेड़खानी के विरुद्ध एफआईआर दर्ज करवाने के लिए किसे आवेदन-पत्र लिखेंगे?

1. थानाध्यक्ष महोदय
2. संस्थापक महोदय
3. बस स्टैंड अधिकारी
4. अधिकारी महोदय

Testbook Solution Correct Option - 1

Que. 173 औपचारिक पत्र में इनमें से कौन-सा विकल्प नहीं होगा?

1. विषय
2. पता
3. अभिवादन
4. दिनांक

Testbook Solution Correct Option - 3

Que. 174 व्यवसाय संबंधी पत्र में संबोधन क्या होगा?

1. आदरणीय
2. महोदय
3. परमपूज्य
4. प्रिय

Testbook Solution Correct Option - 2

Que. 175 नीचे दिये गये गद्यांश को ध्यानपूर्वक पढ़ें और चार विकल्पों में से प्रत्येक प्रश्न का सबसे उचित उत्तर चुने।
समय का आदर करना ही उसका सदुपयोग करना है। जो व्यक्ति समय की सही किमत्त जान लेता है, वही जीवन में सफलता प्राप्त कर पाता है। यह धन से भी अधिक महत्त्वपूर्ण है। धन खोने पर वापस पाया जा सकता है परंतु बीता हुआ समय नहीं लौटाया जा सकता। छात्रों के जीवन में इसका अधिक महत्त्व है। जो छात्र इस उम्र में समय की कद्र करना सीख जाते हैं, वह भविष्य में तरक्की की उंचाईयों को छू लेते हैं। चाणक्य, गाँधी जी, अशोक आदि ने समय का सदुपयोग कर अपने पैरों के निशान छोड़ दिए। जीवन का प्रत्येक क्षण भविष्य का निर्माता है। जो लोग इसके महत्त्व को नहीं समझ पाते, वे केवल हाथ मलते रह जाते हैं। हम चाहे विश्राम कर लें परंतु समय कभी विश्राम नहीं करता। समय के प्रति सजगता मानव जीवन के लिए उपयोगी है। अतः छात्रों को समय की कीमत् पहचानकर इसका सार्थक उपयोग करना चाहिए।

'समय का सदुपयोग' का क्या अर्थ है?

1. उसको संभालकर रखना
2. उसे व्यर्थ न करना
3. उसका अनादर करना
4. उसे व्यर्थ करना

Testbook Solution Correct Option - 2

Que. 176 छात्रों के लिए समय का सदुपयोग अधिक आवश्यक क्यों है?

1. जो इसकी महत्ता समझते हैं वह सफल होते हैं।

2. सदुपयोग करने से सदा विफल होते हैं।
3. कभी भी सफल नहीं होते हैं।
4. सदा पीछे रहते हैं।

Testbook Solution Correct Option - 1

Que. 177 समय धन से अधिक महत्वपूर्ण क्यों है?

1. समय वापस मिल जाएगा पर धन नहीं।
2. बहुत मेहनत से मिलता है।
3. धन वापस मिल जाएगा पर समय नहीं।
4. समय नहीं मिलता।

Testbook Solution Correct Option - 3

Que. 178 निम्न में से कौन-सा विकल्प सजगता का पर्यायवाची नहीं है?

1. प्रमाद
2. सतर्कता
3. होशियारी
4. चौकन्नापन

Testbook Solution Correct Option - 1

Que. 179 इस अनुच्छेद का सबसे उपयुक्त शीर्षक बताएँ।

1. जीवन और समय
2. छात्र जीवन और समय
3. छात्र जीवन
4. समय का अनुपयोग

Testbook Solution Correct Option - 2

Que. 180 भाषा की सार्थक लघुत्तम इकाई किसे माना जाता है?

1. शब्द
2. वर्ण
3. अर्थ
4. मात्रा

Testbook Solution Correct Option - 1

Que. 181 ज्ञानदीप किसकी रचना है?

1. वृंद
2. भूषण
3. शेखनबी
4. रहीम

Testbook Solution Correct Option - 3

Que. 182

रामचंद्रिका की रचना किसने की?

1. सुंदर
2. सेनापति
3. मोहनलाल मिश्र
4. केशव

Testbook Solution Correct Option - 4

Que. 183 जयशंकर प्रसाद जी की पहली कहानी कौन-सी थी?

1. गुंडा
2. सालवती
3. ग्राम
4. मछुआ

Testbook Solution Correct Option - 3

Que. 184 सीता वनवास से संबंधित एक काव्य रचना कौन-सी थी?

1. शबरी
2. महाप्रस्थान
3. संशय की एक रात
4. प्रवाद पर्व

Testbook Solution Correct Option - 4

Que. 185 सही विकल्प का चयन करें जो शुद्ध वाक्य है।

1. कृपया मेरे पत्र पर ध्यान देने की कृपा करें।
2. कृपया मेरे पत्र पर ध्यान दें।
3. मेरे पत्र पर ध्यान दे कृपया।
4. कृपा करके मेरे पत्र पर भी ध्यान दे।

Testbook Solution Correct Option - 2

Que. 186 सही विकल्प का चयन करें जो शुद्ध वाक्य है।

1. वह सारी रात भर पढ़ता रहा।
2. वह सारी रात पढ़ता रहा।
3. रात भर पढ़ता रहा वह।
4. पढ़ता रहा वह सारी रात भर।

Testbook Solution Correct Option - 2

Que. 187 सही विकल्प का चयन करें जो शुद्ध वाक्य है।

1. तुम तुम्हारा काम करो।
2. तुम तुमका काम करो।
3. तुम तेरा काम करो।
4. तुम अपना काम करो।

Testbook Solution Correct Option - 4

Que. 188 सही विकल्प का चयन करें जो शुद्ध वाक्य है।

1. मैंने गुरुजी का दर्शन किया।
2. मैंने गुरुजी को दर्शन किया।
3. मैंने गुरुजी को दर्शन किए।
4. मैंने गुरुजी के दर्शन किए।

Testbook Solution Correct Option - 4

Que. 189 सही विकल्प का चयन करें जो शुद्ध वाक्य है।

1. घर पर सब ठीक-ठाक होंगे।
2. घर में सब ठीक-ठाक होंगे।
3. घर में सब ठीक-ठाक होएंगे।
4. घर को सब ठीक होंगे।

Testbook Solution Correct Option - 2

Que. 190 निम्नलिखित प्रश्न में, चार विकल्पों में से दिए गए वाक्य का सही काल वाला विकल्प पहचानिए।

यदि मैं समय पर स्टेशन पहुँचता तो मेरी गाड़ी न छूटती।

1. संदिग्ध भूतकाल
2. हेतुहेतु मद भूतकाल
3. सामान्य वर्तमानकाल
4. आसन्न भूतकाल

Testbook Solution Correct Option - 2

Que. 191 निम्नलिखित प्रश्न में, चार विकल्पों में से, उस विकल्प का चयन करें जो पक्ष के भेद का सही विकल्प हो।

अब सीता चलने लगी है।

1. प्रगतिद्योतक पक्ष
2. आरंभद्योतक पक्ष
3. पूर्णताद्योतक पक्ष
4. सातप्यद्योतक पक्ष

Testbook Solution Correct Option - 2

Que. 192 निम्नलिखित प्रश्न में, चार विकल्पों में से, उस विकल्प का चयन करें जो वृत्ति के सही भेद का विकल्प को।

जरा मेरी सहायता कीजिए।

1. विध्यर्थ
2. निश्चयार्थ
3. संदेहार्थ
4. संकेतार्थ

Testbook Solution Correct Option - 1

Que. 193

जो सर्वनाम शब्द वक्ता, श्रोता अथवा किसी अन्य व्यक्ति के लिए प्रयोग किया जाता है उसे क्या कहते हैं?

1. संबंधवाचक सर्वनाम
2. पुरुषवाचक सर्वनाम
3. अनिश्चयवाचक सर्वनाम
4. निजवाचक सर्वनाम

Testbook Solution Correct Option - 1

Que. 194 निम्नलिखित विकल्पों में से दिए गए वाक्य का सही वाक्य भेद पहचानिए।

पुस्तक बाजार में बहुत महँगी थी, इसलिए पुस्तकालय से ले ली।

1. विधानवाचक वाक्य
2. सरल वाक्य
3. मिश्र वाक्य
4. संयुक्त वाक्य

Testbook Solution Correct Option - 1

Que. 195 किसी अक्षर या शब्द पर विशेष बल देने के लिए किस चिह्न का प्रयोग किया जाता है?

1. इकहरा उद्धरण
2. दुहरा उद्धरण
3. विवरण चिह्न
4. विस्मरण

Testbook Solution Correct Option - 1

Que. 196 उस विकल्प का चयन करें जो दिए गए मुहावरे का सही अर्थ है।

कमर टूटना।

1. थक जाना
2. जीत जाना
3. कमर टूट जाना।
4. चोट लगना

Testbook Solution Correct Option - 1

Que. 197 उस विकल्प का चयन करें जो दिए गए मुहावरे का सही अर्थ है।

माथे पर बल पड़ना।

1. सिर दर्द होना
2. पसंद करना
3. गुस्सा करना
4. असंतोष प्रकट करना

Testbook Solution Correct Option - 4

Que. 198 उस विकल्प का चयन करें जो दिए गए मुहावरे का सही अर्थ है।

आठ-आठ आँसू रोना।

1. पछताना
2. बहुत अधिक विलाप करना
3. आश्चर्यचकित होना
4. गिन चुनकर रोना

Testbook Solution Correct Option - 1

Que. 199 उस विकल्प का चयन करें जो दी गई लोकोक्ति का सही अर्थ है।

आँख का अंधा गाँठ का पूरा।

1. अच्छा व्यक्ति
2. मूर्ख धनी
3. सोच समझकर करना
4. कठोर व्यक्ति

Testbook Solution Correct Option - 2

Que. 200 सही विकल्प का चयन करें जो दिए गए वाक्य का सही अंग्रेजी अनुवाद है।

भारत को अनाज के क्षेत्र में आत्मनिर्भर बनाया गया।

1. India is made self sufficient in the grain sector.
2. India was made self-reliant in the grain.
3. India was made dependent in the grain sector.
4. India was make self reliant in the grain sector.

Testbook Solution Correct Option - 2

