



# Teachingninja.in



**Latest Govt Job updates**



**Private Job updates**



**Free Mock tests available**

**Visit - [teachingninja.in](https://teachingninja.in)**



Teachingninja.in

# **BSF Constable**

**Memory Based Paper  
(Tradesmen) 04 Dec, 2022**



## 125 Questions

---

**Que. 1** Shadows are formed when a/an \_\_\_\_\_ object comes in the path of light.

1. Opaque
2. Transparent
3. Luminous
4. All of the above

Correct Option - 1

---

**Que. 2** Name the disinfectant that is used to purify water after it has been Iodine-treated.

1. Potassium
2. Iron
3. Vitamin C
4. Calcium

Correct Option - 3

---

**Que. 3** In the context of BRICS nations, which nation does the alphabet S represent?

1. South Korea
2. Spain
3. South Africa
4. Saudi Arabia

Correct Option - 3

---

**Que. 4** What is the SI unit of electrical resistance?

1. Ampere
2. Ohm
3. Mole
4. Volt

Correct Option - 2

---

**Que. 5** 'Alexander the Great' invaded India in the year

1. 263 BC
2. 326 BC
3. 236 BC
4. 362 BC

Correct Option - 2

---

**Que. 6** Which of the following states has the highest life expectancy at birth?

1. Andhra Pradesh
2. Jammu and Kashmir
3. Himachal Pradesh
4. Kerala

Correct Option - 4

---

---

**Que. 7** The \_\_\_\_\_ were the first Europeans to come to India.

1. French
2. Portuguese
3. Dutch
4. English

Correct Option - 2

---

**Que. 8** Name the Strait that separates India and its neighbour Sri Lanka.

1. Mannar Strait
2. Palk Strait
3. Malacca Strait
4. Cook Strait

Correct Option - 2

---

**Que. 9** Who is the very first Mughal emperor?

1. Alam Khan
2. Babur
3. Mohammed
4. Akbar

Correct Option - 2

---

**Que. 10** Name the Indian company which first touched a market capitalization of 8 trillion INR in the Indian stock market.

1. Tata Consultancy Services
2. HDFC
3. Reliance Industries
4. IOCL

Correct Option - 3

---

**Que. 11** Name the minister who is acting as Finance Minister on behalf the current Finance Minister Arun Jaitley who is unwell.

1. Piyush Goyal
2. Suresh Prabhu
3. Ram Vilas Paswan
4. Smriti Irani

Correct Option - 1

---

**Que. 12** World Polio Day is observed across the world on which day?

1. October 24<sup>th</sup>
2. February 14<sup>th</sup>
3. March 19<sup>th</sup>
4. January 23<sup>rd</sup>

Correct Option - 1

---

---

**Que. 13** Who was the first scientist to be awarded two Nobel Prizes?

1. Albert Einstein
2. Thomas Edison
3. Marie Curie
4. Frank Templeton

Correct Option - 3

---

**Que. 14** The idea of the provision of "Concurrent List" in the Constitution of India is taken from which of the following country?

1. United States of America
2. United Kingdom
3. Canada
4. Australia

Correct Option - 4

---

**Que. 15** In which state would you find the tribe called Kani?

1. Maharashtra
2. Kerala
3. Madhya Pradesh
4. Punjab

Correct Option - 2

---

**Que. 16** How many silver medals India won at the 18<sup>th</sup> Asian games in Jakarta?

1. 24
2. 34
3. 44
4. 11

Correct Option - 1

---

**Que. 17** Black soil is ideal for the cultivation of which of these crops?

1. Sugarcane
2. Wheat
3. Cotton
4. Paddy

Correct Option - 3

---

**Que. 18** Renowned Musician Annapurna Devi is associated with which instrument?

1. Rudra veena
2. Sarangi
3. Veena
4. Surbahar

Correct Option - 4

---

The Taj Mahal is an ivory-white marble mausoleum on the south bank of \_\_\_\_\_ river in Agra.

- Que. 19** | Ganga
2. Yamuna
  3. Saraswati
  4. Tapti

Correct Option - 2

---

- Que. 20** | The first practical light bulb was invented by \_\_\_\_\_.
1. Galileo Galilei
  2. Alexander Graham Bell
  3. Thomas Alva Edison
  4. Isaac Newton

Correct Option - 3

---

- Que. 21** | Cobalt Oxide imparts which color to glass?
1. Green
  2. Purple
  3. Blue
  4. White

Correct Option - 3

---

- Que. 22** | Which of the following is an instrument of the monetary policy of the Reserve Bank of India?
1. Public Debt
  2. Tax Rate
  3. Government Expenditure
  4. Repo Rate

Correct Option - 4

---

- Que. 23** | Vedic religion was also known as \_\_\_\_\_.
1. Buddhism
  2. Brahmanism
  3. Jainism
  4. Hedonism

Correct Option - 2

---

- Que. 24** | Apart from Mahatma Gandhi, who was the other prominent personality to protest against untouchability in India?
1. Bhimrao Ambedkar
  2. Subhash Chandra Bose
  3. Jawarharlal Neharl
  4. Bhagat Singh

Correct Option - 1

---

- Que. 25** | The Yamuna river flows parallel to the \_\_\_\_\_.
1. Krishna
  2. Ganga

3. Kaveri
4. Brahmaputra

Correct Option - 2

---

**Que. 26** A number 5132832 is divisible by

1. 5
2. 6
3. 7
4. 9

Correct Option - 2

---

**Que. 27** The sum of two numbers is 140. If their LCM is 240 and HCF is 20, then find the smaller number.

1. 60
2. 140
3. 20
4. 80

Correct Option - 1

---

**Que. 28** The value of  $1\frac{4}{11} \div \left\{ \left[ \frac{11}{80} \div \frac{3}{4} \left( \frac{1}{4} - \frac{1}{3} \times \frac{1}{5} \right) \div 1\frac{5}{6} \right] + \frac{9}{11} \right\}$  is

1. 1
2. 5
3. 4
4. 10

Correct Option - 1

---

**Que. 29** If the volume of a cube is  $81\sqrt{3} \text{ cm}^3$ , then its total surface area is:

1.  $166 \text{ cm}^2$
2.  $152 \text{ cm}^2$
3.  $164 \text{ cm}^2$
4.  $162 \text{ cm}^2$

Correct Option - 4

---

**Que. 30** Length of each side of a rhombus is 13 cm and one of the diagonal is 24 cm. What is the area (in  $\text{cm}^2$ ) of the rhombus ?

1. 60
2. 120
3. 300
4. 240

Correct Option - 2

---

**Que. 31** What is the perimeter of a right-angled triangle whose sides (making  $90^\circ$ ) are  $20\sqrt{3} \text{ cm}$  and  $15\sqrt{3} \text{ cm}$ ?

1.  $65\sqrt{3} \text{ cm}$
2.  $60\sqrt{3} \text{ cm}$
3.  $50\sqrt{3} \text{ cm}$

4.  $55\sqrt{3}$  cm

Correct Option - 2

---

**Que. 32** Two circles of radii 14 cm and 10 cm intersect each other. and the length of their common chord is 16 cm. What is the distance (in cm) between their centres?

1.  $6 + 4\sqrt{33}$
2.  $6 + 2\sqrt{33}$
3.  $6 + 5\sqrt{33}$
4.  $6 + 3\sqrt{33}$

Correct Option - 2

---

**Que. 33** Ravi's age is  $\frac{3}{5}$  of Shyam's ages. After x years the ratio of the ages of Ravi and Shyam becomes 5 : 7 If initially the sum of their ages is 32, then what is the value of x?

1. 8
2. 2
3. 7
4. 4

Correct Option - 1

---

**Que. 34** The fourth proportional to 5, 8 and 30 is:

1. 50
2. 60
3. 48
4. 90

Correct Option - 3

---

**Que. 35** A total of 57 sweets were distributed among 10 children such that each girl gets 6 sweets and each boy gets 5 sweets. Find the number of boys.

1. 6
2. 4
3. 3
4. 5

Correct Option - 3

---

**Que. 36** Which of the following fraction is the smallest?

$\frac{15}{16}$ ,  $\frac{19}{20}$ ,  $\frac{24}{25}$ ,  $\frac{34}{35}$

1.  $\frac{19}{20}$
2.  $\frac{24}{25}$
3.  $\frac{15}{16}$
4.  $\frac{34}{35}$

Correct Option - 3

---

**Que. 37**  $\sqrt{110\frac{1}{4}}$  is equal to

1. 12.0
2. 11.5
3. 11.0
4. 10.5

Correct Option - 4

---

**Que. 38** If  $\sqrt{x} = 256$ , then the value of x will be

1. 14
2. 16
3. 18
4. 20

Correct Option - 2

---

**Que. 39** The average of four consecutive even numbers is 27. Find the largest of these numbers.

1. 24
2. 30
3. 32
4. 28

Correct Option - 2

---

**Que. 40** If 40% of 40% of x is 40 then 'x' is

1. 100
2. 250
3. 400
4. None of these

Correct Option - 2

---

**Que. 41** A sum of money becomes Rs 1500 in 3 years at a 2% simple rate of interest per annum, then in how many years will it become Rs. 1800?

1.  $16\frac{2}{5}$
2.  $4\frac{2}{5}$
3.  $13\frac{3}{5}$
4.  $5\frac{2}{5}$

Correct Option - 3

---

**Que. 42** A can do some work in 15 days and B can do the work in 30 days. A and B worked together. B did that work for 5 days and he left the work. In how many days remaining work will be completed in this way?

1.  $7\frac{1}{2}$
2. 8
3.  $6\frac{1}{2}$
4. 9

Correct Option - 1

---

**Que. 43** Two persons are standing on either side of a 1200 m long bridge, if they walk towards each other at the speed of 5 m/min and 10 m/min respectively, in how much time will they meet?

1. 60 min
2. 80 min
3. 85 min
4. 90 min

Correct Option - 2

---

**Que. 44** The difference between the ages of Rahim and his uncle is 10 years. After 2 years if the sum of their ages is 66 years, then what will be the age of the uncle?

1. 51
2. 49
3. 36
4. 41

Correct Option - 3

---

**Que. 45** There are some hens and goats in a field. The sum of all the heads is 77 and the sum of the legs is 248. The number of hens in the farm is?

1. 25
2. 30
3. 40
4. 47

Correct Option - 2

---

**Que. 46** If  $(x + 3)$  is a factor of  $a^2 + 12x - 13$ , then what is the value of  $a$ ?

1. 8
2. 7
3. 6
4. 5

Correct Option - 2

---

**Que. 47** Find the value of  $\sin 60^\circ \cos 30^\circ + \tan 45^\circ \cos 60^\circ \sin 30^\circ$

1.  $\frac{13}{18}$
2. 5
3. 1
4.  $\frac{-1}{2}$

Correct Option - 3

---

**Que. 48**  $\frac{\frac{3}{5} - \frac{1}{5}}{\frac{3}{5}}$  of  $\frac{1}{5}$  is equal to

1. 1
2. 3

3.  $\frac{7}{4}$
4. 25

Correct Option - 3

---

**Que. 49** Five years ago, the average age of A,B,C and D was 45 years. By including X in the present lot their present average changes to 49 years. What is the present age of X?

1. 40 years
2. 45 years
3. 49 years
4. 48 years

Correct Option - 2

---

**Que. 50** If the ratio of the areas of two squares is 9 : 1, then the ratio of their is

1. 9:1
2. 3:1
3. 3:4
4. 1:3

Correct Option - 2

---

**Que. 51** Find out the wrong number in the given series:

17, 25, 37, 50, 65, 82, 101

1. 25
2. 17
3. 101
4. 65

Correct Option - 1

---

**Que. 52** Select the related number from the given alternatives.

46 : 48 :: 54 : ?

1. 59
2. 40
3. 67
4. 62

Correct Option - 2

---

**Que. 53** Find the odd one from the following.

1. Day - Night
2. Clever - Foolish
3. Clear - Blurred
4. Arrive - Come

Correct Option - 4

---

**Que. 54** In a code language, QUESTION is coded as NXBVQLLQ. How would REPLY be coded as in that language?

1. YHMOV

2. OBMVI
3. VHSOB
4. OHMOV

Correct Option - 4

---

**Que. 55** Five students A, B, C, D and E are sitting in a row. D is on the right of E. B is on the left of E but is on the right of A. D is on the left of C. Who is sitting on the extreme left?

1. B
2. E
3. C
4. A

Correct Option - 4

---

**Que. 56** In a particular code language 'ABASEMENT' is written as 'EECTEIBLS' then how 'ABANDONED' is written in that language?

1. EECODKKDD
2. EECOEIBLC
3. EECODKKCC
4. EECTDLLCC

Correct Option - 3

---

**Que. 57** Vijay starts walking straight towards East. After walking 75 meters he turns to the left and walks 25 meters straight. Again he turns to the left and walks a distance of 40 meters straight. Again he turns to the left and walks a distance of 25 meters. How far is he from the starting point?

1. 115 meters
2. 50 meters
3. 35 meters
4. 140 meters

Correct Option - 3

---

**Que. 58** Arrange the following cricket equipment in a logical and meaningful order.

1. Shoes
2. Helmet
3. Thigh guard
4. Chest Guard
5. Shin pad

1. 2, 4, 3, 5, 1
2. 2, 5, 3, 4, 1
3. 5, 2, 3, 4, 1
4. 2, 5, 4, 3, 1

Correct Option - 1

---

**Que. 59** Find the wrong term in the series?

2, 4, 12, 48, 240, 1444

1. 240
2. 48

- 3. 1444
- 4. 12

Correct Option - 3

**Que. 60** **Directions:** In the following, series of numbers are given following a certain pattern. One term in the number series is wrong. Find the wrong term.

1, 3, 7, 15, 27, 63, 127

- 1. 7
- 2. 15
- 3. 27
- 4. 63

Correct Option - 3

**Que. 61** Three of the following four words are alike in a certain way and one is different. Choose the odd one.

- 1. Dead Sea
- 2. Philippine Sea
- 3. Arabian Sea
- 4. Bering Sea

Correct Option - 1

**Que. 62** Complete the following number series by choosing the correct option.

240, 306, 380, 462, ?

- 1. 602
- 2. 586
- 3. 524
- 4. 552

Correct Option - 4

**Que. 63** If '÷' stands for 'subtraction', '+' stands for 'multiplication', '×' stands for 'addition' and '-' stands for 'division', then which of the following equations will be correct?

- 1.  $245 \times 55 \div 3 + 321 - 3 = 20$
- 2.  $920 - 10 \times 5 + 131 \div 210 = 530$
- 3.  $860 - 86 + 25 \div 27 \times 182 = 405$
- 4.  $973 - 7 \times 12 \div 17 + 4 = 85$

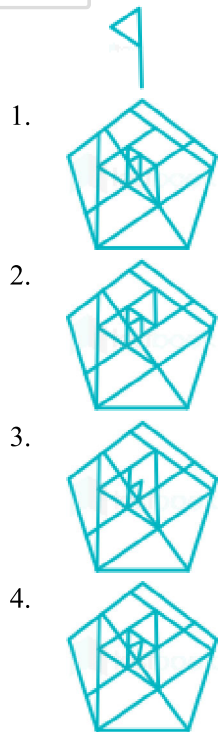
Correct Option - 3

**Que. 64** Seven people, P, Q, R, S, T, U and V, are sitting in a straight row, facing the north. Only two people sit to the right of U. Only two people sit to the left of R. Only two people sit between U and Q. Only three people sit between R and V. T is not an immediate neighbour of U. S sits to the right of U. Who sits to the immediate right of U?

- 1. P
- 2. S
- 3. R
- 4. T

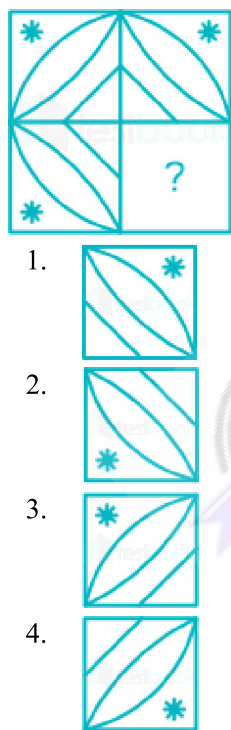
Correct Option - 2

**Que. 65** Select the option figure in which the given figure is embedded (rotation is NOT allowed).



Correct Option - 4

**Que. 66** Select the figure from the options that can replace the question mark (?) and complete the given pattern (rotation is NOT allowed).



Correct Option - 4

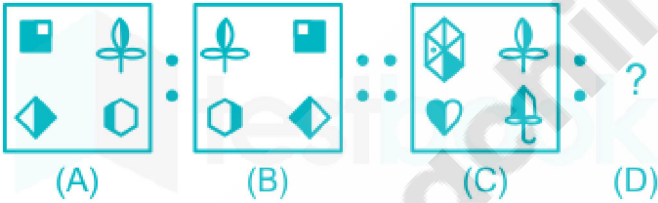
**Que. 67** Select the figure that will come in place of the question mark (?) in the following figure series.



- 1.
- 2.
- 3.
- 4.

Correct Option - 2

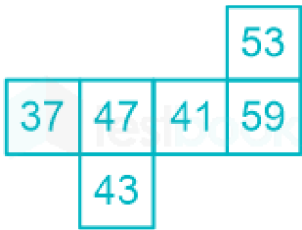
**Que. 68** Select the option that is related to the figure (C) in the same way as figure (B) is related to figure (A).



- 1.
- 2.
- 3.
- 4.

Correct Option - 2

**Que. 69** In the given figure, what will be the number on the face opposite to 47, if the given sheet is folded into a cube?



- 1. 37
- 2. 41
- 3. 59
- 4. 43

Correct Option - 3

**Que. 70** Select the option that represents the correct order of the given words as they would appear in an English dictionary.

- 1. Catalyst
  - 2. Carrot
  - 3. Calcium
  - 4. Calculate
  - 5. Calendar
- 1. 4, 3, 5, 2, 1
  - 2. 4, 5, 3, 2, 1
  - 3. 3, 4, 5, 2, 1
  - 4. 3, 2, 1, 4, 5

Correct Option - 3

**Que. 71** Select the Venn diagram that best illustrates the relationship between the following classes.

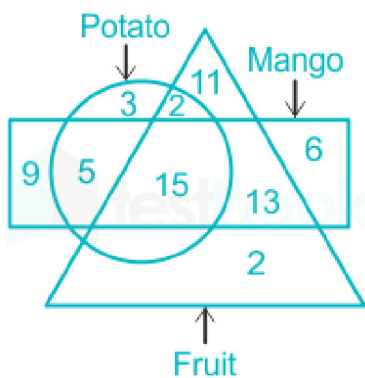
Doctor, Professor, Cardiologist

1 = Doctor, 2 = Cardiologist, 3 = Professor

- 1.
- 2.
- 3.
- 4.

Correct Option - 1

**Que. 72** Based on the given venn diagram, which of the following statement(s) is/are correct?



- I. Number of mango which are only fruit are 13.
- II. Number of potato which are neither fruit and nor mango are 5.
- Both I and II
  - Only I
  - Neither I nor II
  - Only II

Correct Option - 2

**Que. 73** Three Statements are given followed by four conclusions numbered 1, 2, 3, and 4. Assuming the statements to be true, even if they seem to be at variance with commonly known facts, decide which of the conclusions logically does NOT follow(s) from the statements.

**Statements:**

- All K are S.
- No S is a B.
- Some B are T.

**Conclusions:**

- No K are B.
  - Some T are not S.
  - Some T are B.
  - All B being K is a possibility.
- Only 2 does not follow.
  - Only 1 does not follow.
  - Only 3 does not follow.
  - Only 4 does not follow.

Correct Option - 4

**Que. 74** Pointing towards the photograph of a lady, Varun said, "She is my father-in-law's son's only sister's mother-in-law". How is Varun related to that lady?

- Son-in-law
- Brother
- Son
- Husband

Correct Option - 3

**Que. 75** Which of the following conclusions can be drawn on the basis of the given statements

- Statement 1: Divya is taller than Viru.
- Statement 2: Sneha is immediate shorter than Divya.

Statement 3: Arvind is taller than Viru but shorter than Sneha.

1. Viru is taller than all of them.
2. Arvind is taller than Divya.
3. Viru is taller than Sneha.
4. Divya is taller than Arvind.

Correct Option - 4

---

**Que. 76** He put across his ideas to the minister.

1. made available
2. strongly expressed
3. effectively conveyed
4. laid aside

Correct Option - 3

---

**Que. 77** She is too fond of her own voice.

1. loves singing
2. very selfish
3. does not listen properly to anyone else
4. very talkative

Correct Option - 4

---

**Que. 78** To shed crocodile tears.

1. to pretend grief
2. to weep profusely
3. to grieve seriously
4. to mock something

Correct Option - 1

---

**Que. 79** **Direction:** In the following sentence, a proverb is highlighted. Select the alternative which best describes its use in the sentence.

The kind old woman received the stranger with open arms.

1. With her arms free
2. With warmth
3. With restraint
4. With gratitude

Correct Option - 2

---

**Que. 80** **Direction:** In the following sentence, a proverb is highlighted. Select the alternative which best describes its use in the sentence.

The sales of the company are increasing by leaps and bounds.

1. Very rapidly
2. In calculated ways
3. Very slowly
4. Far lesser than expected

Correct Option - 1



---

**Que. 81** **Direction:** Select the word that is nearly opposite to the words given.  
Chronic

1. pathetic
2. temporary
3. characteristic
4. mild

Correct Option - 4

---

**Que. 82** **Direction:** Select the word that is nearly opposite to the words given.  
Conceal

1. explain
2. show off
3. describe
4. reveal

Correct Option - 4

---

**Que. 83** Choose the right word to fill in the blanks.  
I hanged my \_\_\_\_\_ on the leg of the table.

1. two
2. toe
3. too
4. to

Correct Option - 2

---

**Que. 84** Choose the right word to fill in the blanks.  
I always use \_\_\_\_\_ when I make rotis.

1. flour
2. floor
3. flora
4. flower

Correct Option - 1

---

**Que. 85** Choose the right word to fill in the blanks.  
My \_\_\_\_\_ is very \_\_\_\_\_.

1. deer, dear, deer
2. dear, deer, dear
3. dear, dear, deer
4. deer, deer, dear

Correct Option - 2

---

**Que. 86** **Direction:** Select the word that is most similar in meaning.  
Solitude

1. aloofness
2. musical composition
3. true statement

- single mindedness

Correct Option - 1

---

**Que. 87** **Direction:** Select the word that is most similar in meaning.

Relish

- realise
- taste
- enjoy
- reveal

Correct Option - 3

---

**Que. 88** **Direction:** Select the word that is most similar in meaning.

Envisaged

- ensured
- idealised
- created
- contemplated

Correct Option - 4

---

**Que. 89** **Direction:** Select the word that is most similar in meaning.

Infer

- suggest
- calculate
- debate
- conclude

Correct Option - 4

---

**Que. 90** **Direction:** Select the word that is most similar in meaning.

Camouflage

- fabric
- cover
- demonstrate
- disguise

Correct Option - 4

---

**Que. 91** **Read the passage and answer the questions that follow.**

From the world of magic, hypnosis is moving into the world of medicine, from hocus-pocus performed by men in black capes, to hypnotherapy practiced by doctors in white coats. The purpose is to help people stop smoking, lose weight, overcome phobias, and control pain in a variety of medical situations, from childbirth to cancer. Research laboratories are currently checking out the success rate of therapy under hypnosis, while medical journals stand by to publish the results. And the important thing is, nobody is laughing.

In the 1840s, a British doctor in Calcutta created a controversy by performing over 1000 operations with hypnosis as the only anesthesia. During the World Wars, German and British doctors used hypnosis to treat war neuroses.

What is the meaning of Hypnosis?

- A trancelike state

2. Autosuggestion
3. Anesthesia
4. Hocus-pocus

Correct Option - 1

---

**Que. 92** Nobody is laughing at hypnotherapy now, because they are

1. Angry
2. Taking it seriously
3. Annoyed
4. Sad

Correct Option - 2

---

**Que. 93** The purpose of hypnotherapy is to

1. Cure patients
2. To help people
3. Carry out research
4. Check out the success rate

Correct Option - 2

---

**Que. 94** German and British doctors used hypnosis:

1. As anesthesia was not available
2. As anesthesia was not needed
3. To treat war neuroses
4. As it was fashionable during the war period

Correct Option - 3

---

**Que. 95** What is the meaning of word 'Phobia'?

1. Fear
2. Love
3. Mania
4. Neurosis

Correct Option - 1

---

**Que. 96** Identify the part of the sentence that has an error:

The shark attacked the swimmer when he go deep into the sea.

1. The shark
2. deep into the sea
3. attacked the swimmer
4. when he go

Correct Option - 4

---

**Que. 97** **Directions:** Identify the part of the sentence that has an error.

The greatest merit of democracy is that everyone feels free and can pursue his/her interest.

1. The greatest merit of
2. democracy is that

3. can pursues his/her interest
4. everyone feels free and

Correct Option - 3

---

**Que. 98** **Directions:** Identify the part of the sentence that has an error.  
She would resign sooner then take part in such dishonest business deals.

1. sooner then
2. She would resign
3. take part in such dishonest
4. business deals

Correct Option - 1

---

**Que. 99** **Directions:** Identify the part of the sentence that has an error.  
She was taller than either of her five sisters.

1. She was taller
2. five sisters
3. of her
4. than either

Correct Option - 4

---

**Que. 100** **Directions:** Identify the part of the sentence that has an error.  
Rather than go with Amit, he decided to stay at home.

1. with Amit
2. Rather than go
3. he decides
4. to stay at home

Correct Option - 2

---

**Que. 101** बाबा नागार्जुन किस भाषा के लेखक थे?

1. बघेली
2. खड़ी बोली
3. मैथिली
4. अवधि

Correct Option - 3

---

**Que. 102** उर्दू किस भाषा का शब्द है

1. तुर्की
2. फारसी
3. अरबी
4. संस्कृत

Correct Option - 1

---

**Que. 103** प्रसन्नता शब्द मे कौन सी ध्वनी है

1. संयुक्त ध्वनि

2. सम्पृक्त ध्वनि
3. युग्मक ध्वनि
4. उपर्युक्त में से कोई

Correct Option - 3

---

**Que. 104** मेरे पास सोने के आभूषण है इस वाक्य में कौन सी संज्ञा है

1. भाववाचक
2. व्यक्तिवाचक
3. द्रव्यवाचक
4. सदुहवाचक

Correct Option - 3

---

**Que. 105** राम सो रहा है इस वाक्य में कौन सी क्रिया है

1. अकर्मक
2. सकर्मक
3. प्रेरणार्थक
4. द्विकर्मक

Correct Option - 1

---

**Que. 106** ऐसे शब्द जिनमें लिंग, वचन, कारक आदि के कारण कोई परिवर्तन नहीं होता, उन्हें कहा जाता है?

1. विशेषण
2. अव्यय
3. कारक
4. क्रिया विशेषण

Correct Option - 2

---

**Que. 107** तल्लीन शब्द का संधि विच्छेद है?

1. तव + लीन
2. तल + लीन
3. तत + लीन
4. तत् + लीन

Correct Option - 4

---

**Que. 108** पुरोहित में उपसर्ग है

1. पुरा
2. पुरस
3. पुर
4. पुरः

Correct Option - 4

---

**Que. 109** आसरा शब्द का तत्सम शब्द लिखिए

1. आश्रय
2. टासर
3. टसर
4. आश्रित

Correct Option - 1

---

**Que. 110** मीनाक्षी का पर्यायवाची शब्द है

1. सुंदरी
2. दुर्गा
3. मछली
4. लक्ष्मी

Correct Option - 2

---

**Que. 111** गौरव का विलोम शब्द

1. लाघव
2. लघुता
3. लघूतव
4. लघुतम

Correct Option - 1

---

**Que. 112** जिसे किसी से लगाव ना हो

1. नश्वर
2. लिप्सु
3. निर्लिप्त
4. अलगाववादी

Correct Option - 3

---

**Que. 113** उपर्युक्त विकल्प चुनिए  
व्यायाम से शरीर \_\_\_\_\_ होता है

1. विकसित
2. सोमय
3. सुंदर
4. पुष्ट

Correct Option - 4

---

**Que. 114** वाक्य को पूरा कीजिए

बस ने उस महिला को गिरा दिया \_\_\_\_\_ रोजी रोटी कमाने के लिए बहुत परिश्रम करती है

1. जिसने
2. जिसे
3. जहां
4. जो



Correct Option - 4

**Que. 115** निम्नलिखित वाक्यों में शुद्ध वाक्य है-

1. श्रीकृष्ण के अनेकों नाम है।
2. भगवान श्रीकृष्ण के अनेकों नाम का उल्लेख मिलता है।
3. श्रीकृष्ण को अनेकों नाम का उल्लेख मिलता है।
4. श्रीकृष्ण के अनेक नाम हैं

Correct Option - 4

**Que. 116** अंडे सेना मुहावरे का अर्थ है

1. मुर्गी के चूजा के ऊपर बैठना
2. स्वावलंबी होना
3. स्वार्थ सिद्ध करना
4. घर में बेकार बैठना

Correct Option - 4

**Que. 117** दिए गए प्रश्न में वाक्य के पहले और अंतिम भाग को क्रमशः (1) और (6) की संख्या दी गई है। इनके बीच में आने वाले अंशों को चार भागों में बाँटकर (य), (र), (ल), (व) की संख्या दी गई है। इन विभाजित भागों को ध्यानपूर्वक पढ़कर दिए गए विकल्पों में से उचित क्रम का चुनाव कीजिए।  
इंसान की जिन्दगी (य) कहानी ज़रूर होगी (ल) में एक संघर्ष की (र) हर सफल(व)

1. व, य, ल, र
2. र, य, ल, व
3. व, य, र, ल
4. र, ल, य, व

Correct Option - 3

**Que. 118** सतगुरु की महिमा अनंत, अनंत किया उपगार।

लोचन अनंत उघाड़िया, अनंत दिखावणहार।।

इन पंक्तियों में कौन सा रस निहित है?

1. वात्सल्य
2. संयोग शृंगार
3. शांत रस
4. वीर रस

Correct Option - 3

**Que. 119** छंद कितने प्रकार के होते हैं?

1. 2
2. 5
3. 3
4. 6

Correct Option - 3



**Que. 120** 'मन-सागर, मनसा लहरि बूड़े-बहे अनेक'।

प्रस्तुत पंक्तियों में कौन सा अलंकार है?

1. अतद्गुण
2. रूपक
3. श्लेष
4. वक्रोक्ति

Correct Option - 2

**Que. 121** 'चिन्तामणि' के रचयिता है-

1. सुमित्रानन्दन पन्त
2. महाप्राण निराला
3. रामचन्द्र शुक्ल
4. महादेवी वर्मा

Correct Option - 3

**Que. 122** दिए गये गद्यांश को पढ़कर प्रश्न के लिए सही उत्तर का चयन कीजिए:

पर्यावरण के प्रति गहरी संवेदनशीलता प्राचीनकाल से ही मिलती है। अथर्ववेद में लिखा है - भूमि माता है, हम पृथ्वी की संतान हैं। एक स्थान पर यह भी लिखा है कि हे पवित्र करने वाली भूमि, हम कोई ऐसा काम न करें जिससे तेरे हृदय को आघात पहुँचे। हृदय को आघात पहुँचाने का यहाँ अर्थ है पृथ्वी के पारिस्थितिकी तंत्र के साथ क्रूर छेड़छाड़। हमें प्राकृतिक संसाधनों के अप्राकृतिक और असीमित दोहन से बचना होगा। आज आवश्यकता इस बात की है कि विश्व के तमाम राष्ट्र जलवायु परिवर्तन के गंभीर खतरे को लेकर आपसी मतभेद भुला दें और अपनी-अपनी ज़िम्मेदारी ईमानदारी से निभाएँ, ताकि समय रहते सर्वनाश से उबरा जा सके। विश्व विनाश से निपटने के लिए सामूहिक एवं व्यक्तिगत प्रयासों की ज़रूरत है। इस दिशा में आन्दोलन हो रहे हैं। अरण्य-रोदन के बदले अरण्य-संरक्षण की बात हो रही है, सचमुच हमें आत्मरक्षा के लिए पृथ्वी की रक्षा करनी होगी। भूमि माता है और हम उसकी संतान - इस कथन को चरितार्थ करना होगा।

किस वेद में लिखा हुआ है भूमि माता है, हम पृथ्वी की संतान है?

1. सामवेद
2. अथर्ववेद
3. यजुर्वेद
4. ऋग्वेद

Correct Option - 2

**Que. 123** दिए गये गद्यांश को पढ़कर प्रश्न के लिए सही उत्तर का चयन कीजिए:

पर्यावरण के प्रति गहरी संवेदनशीलता प्राचीनकाल से ही मिलती है। अथर्ववेद में लिखा है - भूमि माता है, हम पृथ्वी की संतान हैं। एक स्थान पर यह भी लिखा है कि हे पवित्र करने वाली भूमि, हम कोई ऐसा काम न करें जिससे तेरे हृदय को आघात पहुँचे। हृदय को आघात पहुँचाने का यहाँ अर्थ है पृथ्वी के पारिस्थितिकी तंत्र के साथ क्रूर छेड़छाड़। हमें प्राकृतिक संसाधनों के अप्राकृतिक और असीमित दोहन से बचना होगा। आज आवश्यकता इस बात की है कि विश्व के तमाम राष्ट्र जलवायु परिवर्तन के गंभीर खतरे को लेकर आपसी मतभेद भुला दें और अपनी-अपनी ज़िम्मेदारी ईमानदारी से निभाएँ, ताकि समय रहते सर्वनाश से उबरा जा सके। विश्व विनाश से निपटने के लिए सामूहिक एवं व्यक्तिगत प्रयासों की ज़रूरत है। इस दिशा में आन्दोलन हो रहे हैं। अरण्य-रोदन के बदले अरण्य-संरक्षण की बात हो रही है, सचमुच हमें आत्मरक्षा के लिए पृथ्वी की रक्षा करनी होगी। भूमि माता है और हम उसकी संतान - इस कथन को चरितार्थ करना होगा।

प्राचीनकाल शब्द कितने शब्दों से मिलकर बना है?

1. 4
2. 3

3. 1
4. 2

Correct Option - 4

**Que. 124** दिए गये गद्यांश को पढ़कर प्रश्न के लिए सही उत्तर का चयन कीजिए:

पर्यावरण के प्रति गहरी संवेदनशीलता प्राचीनकाल से ही मिलती है। अथर्ववेद में लिखा है - भूमि माता है, हम पृथ्वी की संतान हैं। एक स्थान पर यह भी लिखा है कि हे पवित्र करने वाली भूमि, हम कोई ऐसा काम न करें जिससे तेरे हृदय को आघात पहुँचे। हृदय को आघात पहुँचाने का यहाँ अर्थ है पृथ्वी के पारिस्थितिकी तंत्र के साथ क्रूर छेड़छाड़। हमें प्राकृतिक संसाधनों के अप्राकृतिक और असीमित दोहन से बचना होगा। आज आवश्यकता इस बात की है कि विश्व के तमाम राष्ट्र जलवायु परिवर्तन के गंभीर खतरे को लेकर आपसी मतभेद भुला दें और अपनी-अपनी जिम्मेदारी ईमानदारी से निभाएँ, ताकि समय रहते सर्वनाश से उबरा जा सके। विश्व विनाश से निपटने के लिए सामूहिक एवं व्यक्तिगत प्रयासों की ज़रूरत है। इस दिशा में आन्दोलन हो रहे हैं। अरण्य-रोदन के बदले अरण्य-संरक्षण की बात हो रही है, सचमुच हमें आत्मरक्षा के लिए पृथ्वी की रक्षा करनी होगी। भूमि माता है और हम उसकी संतान - इस कथन को चरितार्थ करना होगा।

प्रकृति के अत्यधिक दोहन से किस बात का खतरा पैदा हो सकता है?

1. सर्वनाश
2. विकिरण
3. मृदा कटाव
4. फसल नाश

Correct Option - 1

**Que. 125** दिए गये गद्यांश को पढ़कर प्रश्न के लिए सही उत्तर का चयन कीजिए:

पर्यावरण के प्रति गहरी संवेदनशीलता प्राचीनकाल से ही मिलती है। अथर्ववेद में लिखा है - भूमि माता है, हम पृथ्वी की संतान हैं। एक स्थान पर यह भी लिखा है कि हे पवित्र करने वाली भूमि, हम कोई ऐसा काम न करें जिससे तेरे हृदय को आघात पहुँचे। हृदय को आघात पहुँचाने का यहाँ अर्थ है पृथ्वी के पारिस्थितिकी तंत्र के साथ क्रूर छेड़छाड़। हमें प्राकृतिक संसाधनों के अप्राकृतिक और असीमित दोहन से बचना होगा। आज आवश्यकता इस बात की है कि विश्व के तमाम राष्ट्र जलवायु परिवर्तन के गंभीर खतरे को लेकर आपसी मतभेद भुला दें और अपनी-अपनी जिम्मेदारी ईमानदारी से निभाएँ, ताकि समय रहते सर्वनाश से उबरा जा सके। विश्व विनाश से निपटने के लिए सामूहिक एवं व्यक्तिगत प्रयासों की ज़रूरत है। इस दिशा में आन्दोलन हो रहे हैं। अरण्य-रोदन के बदले अरण्य-संरक्षण की बात हो रही है, सचमुच हमें आत्मरक्षा के लिए पृथ्वी की रक्षा करनी होगी। भूमि माता है और हम उसकी संतान - इस कथन को चरितार्थ करना होगा।

अरण्य-रोदन से लेखक का क्या तात्पर्य है?

1. वन संरक्षण
2. अरण्य में रोना
3. ऐसा रोना जिस पर कोई ध्यान न दे
4. अरण्य को बचाना

Correct Option - 3

