



Teachingninja.in



Latest Govt Job updates



Private Job updates



Free Mock tests available

Visit - teachingninja.in



Teachingninja.in

**CCI
JA**

Previous Year Paper
20 Jul, 2024 Shift 2



भा.क.नि.



CCI

भारतीय कपास निगम लिमिटेड

एक मिनी रत्न कंपनी (भारत सरकार का उपक्रम, वस्त्र मंत्रालय के अंतर्गत)

The Cotton Corporation of India Ltd.

A Mini Ratna Company

(Government of India undertaking, Under Ministry of Textiles, CIN : U51490MH1970GOI014733)

Participant ID	
Participant Name	
Test Center Name	
Test Date	20/07/2024
Test Time	12:30 PM - 2:30 PM
Subject	JUNIOR ASSISTANT GENERAL

Section : General English

Q.1 Select the most appropriate antonym that can substitute the underlined phrase in the given sentence.

She advised the parents that they should write to the school authorities about their objections to the new policy.

- Ans
- ☒ A. Objectives

☒ B. Acceptance

☒ C. Protestations

☒ D. Motives

Question ID : 630680126992

Option 1 ID : 630680492480

Option 2 ID : 630680492479

Option 3 ID : 630680492478

Option 4 ID : 630680492481

Status : Answered

Chosen Option : B

Q.2 Select the most appropriate option that indicates manner to fill in the blank.

The professor spoke _____ confidence about the upcoming publication.

- Ans
- ☒ A. by

☒ B. over

☒ C. with

☒ D. beyond

Question ID : 630680739384

Option 1 ID : 6306802898128

Option 2 ID : 6306802898130

Option 3 ID : 6306802898129

Option 4 ID : 6306802898131

Status : Answered

Chosen Option : C

Q.3 Select the sentence with NO spelling error.

- Ans
- ☐

A. Mr. Bachchan is a versatule actor who can play all types of roles.
- ☐

B. Mr. Bachchan is a verssatile actor who can play all types of roles.
- ☐

C. Mr. Bachchan is a versattile actor who can play all types of roles.
- ☒

D. Mr. Bachchan is a versatile actor who can play all types of roles.

Question ID : 630680805912

Option 1 ID : 6306803157313

Option 2 ID : 6306803157315

Option 3 ID : 6306803157314

Option 4 ID : 6306803157312

Status : Answered

Chosen Option : B

Q.4 Select the most appropriate ANTONYM of the word given in bold.

The security measures were put in place to thwart untoward incidents from happening during the elections.

- Ans
- ☐

A. Prevent
- ☐

B. Foil
- ☐

C. Hinder
- ☒

D. Facilitate

Question ID : 630680805867

Option 1 ID : 6306803157116

Option 2 ID : 6306803157117

Option 3 ID : 6306803157118

Option 4 ID : 6306803157119

Status : Answered

Chosen Option : A

Q.5 Sentences of a paragraph are given below in jumbled order. Arrange the sentences in the correct order to form a meaningful and coherent paragraph.

- A. It not only facilitates the exchange of information but also plays a crucial role in building connections between individuals.
- B. Communication is the cornerstone of relationships, capable of either strengthening or weakening them.
- C. Communication has, since times immemorial, served as humanity's primary navigational tool in society.
- D. Similarly, it has the power to make or break a person's character.

- Ans
- ☐

A. ACBD
- ☒

B. CABD
- ☐

C. ABDC
- ☐

D. DACB

Question ID : 630680787984

Option 1 ID : 6306803087735

Option 2 ID : 6306803087732

Option 3 ID : 6306803087733

Option 4 ID : 6306803087734

Status : Answered

Chosen Option : B

Q.6 Select the proverb that means the same as the given sentence.

An incompetent person finds excuses for their failures rather than accepting their own mistakes.

- Ans
- ☒

A. Everything comes to him who waits
- ☒

B. No man is an island
- ☒

C. Look before you leap
- ☒

D. A bad workman blames his tools

Question ID : 630680805931

Option 1 ID : 6306803157388

Option 2 ID : 6306803157389

Option 3 ID : 6306803157391

Option 4 ID : 6306803157390

Status : Answered

Chosen Option : D

Q.7 Select the most appropriate option that introduces a condition to fill in the blank.

The experiment will proceed as planned _____ the equipment functions properly.

- Ans
- ☒

A. however
- ☒

B. although
- ☒

C. thus
- ☒

D. provided

Question ID : 630680739395

Option 1 ID : 6306802898171

Option 2 ID : 6306802898169

Option 3 ID : 6306802898170

Option 4 ID : 6306802898168

Status : Answered

Chosen Option : B

Q.8 Select the most appropriate option to fill in the blank.

At my request Tanya introduced me to her friend who is _____ singer and a doctor.

- Ans
- ☒

A. one
- ☒

B. the
- ☒

C. an
- ☒

D. a

Question ID : 630680779765

Option 1 ID : 6306803056245

Option 2 ID : 6306803056243

Option 3 ID : 6306803056244

Option 4 ID : 6306803056246

Status : Answered

Chosen Option : D

Q.9 Select the most appropriate proverb that means the same as the given group of words.

An expert in many things is expert in none

- Ans** ☒ A. Haste makes waste
☒ B. Eagle's don't catch flies
☒ C. No gain, no gain
☒ D. Jack of all trades, master of none

Question ID : **630680805942**

Option 1 ID : **6306803157435**

Option 2 ID : **6306803157432**

Option 3 ID : **6306803157433**

Option 4 ID : **6306803157434**

Status : **Answered**

Chosen Option : **D**

Q.10 Select the option that can be used as a one-word substitute for the given group of words.

A fictitious name used by an author

- Ans** ☒ A. Truant
☒ B. Pseudonym
☒ C. Utopian
☒ D. Nemesis

Question ID : **630680805388**

Option 1 ID : **6306803155243**

Option 2 ID : **6306803155244**

Option 3 ID : **6306803155242**

Option 4 ID : **6306803155241**

Status : **Answered**

Chosen Option : **B**



Comprehension:

Read the given passage and answer the questions that follow.

Adventure Travel

Time for an adventure? Are you a bit bored with your nine-to-five routine? Have a look at our exciting range of holidays and decide what type of adventure you'd like.

Activity holidays

Our activity holidays are for everyone, people who love danger or who just like sports. We have a huge variety of water, snow or desert holidays. We'll take you SCUBA diving in the Red Sea or kayaking and white water rafting in Canada. If you prefer snow, you can try skiing or snowboarding in the Alps or even igloo-building. For those who like warmer weather, we also have sandboarding (the desert version of skateboarding) or camel safaris.

Polar expeditions

Take a cruise to Antarctica or the northern Arctic; explore a land of white natural beauty and wonderful wildlife. Our experts will explain everything about the two poles as you watch the penguins in Antarctica or whales and polar bears in the Arctic. There's no greater adventure than travelling to the ends of the earth. A once-in-a-lifetime experience!

Cultural journeys

Our cultural journeys will help you discover ancient civilisations: India, Thailand, Egypt and many more. Visit temples, palaces and ancient ruins – just remember to bring your camera! Get to know local ways of life by exploring markets, trying exotic foods and meeting local people.

Trekking tours

We have trekking holidays to famous places such as Machu Picchu or the Everest Base Camp Trek, as well as some nearer to home in the Highlands of Scotland. You don't need to be very sporty, just fairly fit. You'll have a great time enjoying nature with a group of new friends. Some of the holidays include camping, but we'll transport the tents for you!

Wildlife holidays

We organise small-group tours to get closer to nature in Africa, Asia or South America. Go on safari in Africa and watch lions and giraffes. Meet the famous turtles of the Galapagos Islands. Look for tigers in India, or take an elephant safari in Sri Lanka. We use local guides and stay in a range of accommodation, from tents to tree houses.

SubQuestion No : 11

Q.11 According to the passage, what kind of physical fitness level is required for most trekking tours?

- Ans
- A. You only need to be able to walk for short distances.
- B. There is no physical fitness requirement.
- C. A moderate level of fitness is recommended.
- D. You need to be very athletic.

Question ID : 630680806013

Option 1 ID : 6306803157705

Option 2 ID : 6306803157707

Option 3 ID : 6306803157706

Option 4 ID : 6306803157704

Status : Answered

Chosen Option : C

Comprehension:

Read the given passage and answer the questions that follow.

Adventure Travel

Time for an adventure? Are you a bit bored with your nine-to-five routine? Have a look at our exciting range of holidays and decide what type of adventure you'd like.

Activity holidays

Our activity holidays are for everyone, people who love danger or who just like sports. We have a huge variety of water, snow or desert holidays. We'll take you SCUBA diving in the Red Sea or kayaking and white water rafting in Canada. If you prefer snow, you can try skiing or snowboarding in the Alps or even igloo-building. For those who like warmer weather, we also have sandboarding (the desert version of skateboarding) or camel safaris.

Polar expeditions

Take a cruise to Antarctica or the northern Arctic; explore a land of white natural beauty and wonderful wildlife. Our experts will explain everything about the two poles as you watch the penguins in Antarctica or whales and polar bears in the Arctic. There's no greater adventure than travelling to the ends of the earth. A once-in-a-lifetime experience!

Cultural journeys

Our cultural journeys will help you discover ancient civilisations: India, Thailand, Egypt and many more. Visit temples, palaces and ancient ruins – just remember to bring your camera! Get to know local ways of life by exploring markets, trying exotic foods and meeting local people.

Trekking tours

We have trekking holidays to famous places such as Machu Picchu or the Everest Base Camp Trek, as well as some nearer to home in the Highlands of Scotland. You don't need to be very sporty, just fairly fit. You'll have a great time enjoying nature with a group of new friends. Some of the holidays include camping, but we'll transport the tents for you!

Wildlife holidays

We organise small-group tours to get closer to nature in Africa, Asia or South America. Go on safari in Africa and watch lions and giraffes. Meet the famous turtles of the Galapagos Islands. Look for tigers in India, or take an elephant safari in Sri Lanka. We use local guides and stay in a range of accommodation, from tents to tree houses.

SubQuestion No : 12

Q.12 What kind of holidays does this travel company NOT offer?

- Ans
- A. Cultural exploration trips

B. Wildlife watching adventures

C. Relaxing beach vacations

D. Trekking expeditions

Question ID : 630680806009

Option 1 ID : 6306803157690

Option 2 ID : 6306803157689

Option 3 ID : 6306803157688

Option 4 ID : 6306803157691

Status : Answered

Chosen Option : C

Comprehension:

Read the given passage and answer the questions that follow.

Adventure Travel

Time for an adventure? Are you a bit bored with your nine-to-five routine? Have a look at our exciting range of holidays and decide what type of adventure you'd like.

Activity holidays

Our activity holidays are for everyone, people who love danger or who just like sports. We have a huge variety of water, snow or desert holidays. We'll take you SCUBA diving in the Red Sea or kayaking and white water rafting in Canada. If you prefer snow, you can try skiing or snowboarding in the Alps or even igloo-building. For those who like warmer weather, we also have sandboarding (the desert version of skateboarding) or camel safaris.

Polar expeditions

Take a cruise to Antarctica or the northern Arctic; explore a land of white natural beauty and wonderful wildlife. Our experts will explain everything about the two poles as you watch the penguins in Antarctica or whales and polar bears in the Arctic. There's no greater adventure than travelling to the ends of the earth. A once-in-a-lifetime experience!

Cultural journeys

Our cultural journeys will help you discover ancient civilisations: India, Thailand, Egypt and many more. Visit temples, palaces and ancient ruins – just remember to bring your camera! Get to know local ways of life by exploring markets, trying exotic foods and meeting local people.

Trekking tours

We have trekking holidays to famous places such as Machu Picchu or the Everest Base Camp Trek, as well as some nearer to home in the Highlands of Scotland. You don't need to be very sporty, just fairly fit. You'll have a great time enjoying nature with a group of new friends. Some of the holidays include camping, but we'll transport the tents for you!

Wildlife holidays

We organise small-group tours to get closer to nature in Africa, Asia or South America. Go on safari in Africa and watch lions and giraffes. Meet the famous turtles of the Galapagos Islands. Look for tigers in India, or take an elephant safari in Sri Lanka. We use local guides and stay in a range of accommodation, from tents to tree houses.

SubQuestion No : 13

Q.13 What activity can you participate in on an all-inclusive trekking holiday, according to the passage?

- Ans
- A. Whale watching

B. Scuba diving

C. Camping

D. Sandboarding

Question ID : 630680806012

Option 1 ID : 6306803157703

Option 2 ID : 6306803157702

Option 3 ID : 6306803157700

Option 4 ID : 6306803157701

Status : Answered

Chosen Option : C

Comprehension:

Read the given passage and answer the questions that follow.

Adventure Travel

Time for an adventure? Are you a bit bored with your nine-to-five routine? Have a look at our exciting range of holidays and decide what type of adventure you'd like.

Activity holidays

Our activity holidays are for everyone, people who love danger or who just like sports. We have a huge variety of water, snow or desert holidays. We'll take you SCUBA diving in the Red Sea or kayaking and white water rafting in Canada. If you prefer snow, you can try skiing or snowboarding in the Alps or even igloo-building. For those who like warmer weather, we also have sandboarding (the desert version of skateboarding) or camel safaris.

Polar expeditions

Take a cruise to Antarctica or the northern Arctic; explore a land of white natural beauty and wonderful wildlife. Our experts will explain everything about the two poles as you watch the penguins in Antarctica or whales and polar bears in the Arctic. There's no greater adventure than travelling to the ends of the earth. A once-in-a-lifetime experience!

Cultural journeys

Our cultural journeys will help you discover ancient civilisations: India, Thailand, Egypt and many more. Visit temples, palaces and ancient ruins – just remember to bring your camera! Get to know local ways of life by exploring markets, trying exotic foods and meeting local people.

Trekking tours

We have trekking holidays to famous places such as Machu Picchu or the Everest Base Camp Trek, as well as some nearer to home in the Highlands of Scotland. You don't need to be very sporty, just fairly fit. You'll have a great time enjoying nature with a group of new friends. Some of the holidays include camping, but we'll transport the tents for you!

Wildlife holidays

We organise small-group tours to get closer to nature in Africa, Asia or South America. Go on safari in Africa and watch lions and giraffes. Meet the famous turtles of the Galapagos Islands. Look for tigers in India, or take an elephant safari in Sri Lanka. We use local guides and stay in a range of accommodation, from tents to tree houses.

SubQuestion No : 14

Q.14 If you are interested in learning about ancient ruins and local cultures, which type of holiday might be best for you?

- Ans
- A. Trekking tours

B. Cultural journeys

C. Activity holidays

D. Wildlife holidays

Question ID : 630680806011

Option 1 ID : 6306803157698

Option 2 ID : 6306803157697

Option 3 ID : 6306803157696

Option 4 ID : 6306803157699

Status : Answered

Chosen Option : B

Comprehension:

Read the given passage and answer the questions that follow.

Adventure Travel

Time for an adventure? Are you a bit bored with your nine-to-five routine? Have a look at our exciting range of holidays and decide what type of adventure you'd like.

Activity holidays

Our activity holidays are for everyone, people who love danger or who just like sports. We have a huge variety of water, snow or desert holidays. We'll take you SCUBA diving in the Red Sea or kayaking and white water rafting in Canada. If you prefer snow, you can try skiing or snowboarding in the Alps or even igloo-building. For those who like warmer weather, we also have sandboarding (the desert version of skateboarding) or camel safaris.

Polar expeditions

Take a cruise to Antarctica or the northern Arctic; explore a land of white natural beauty and wonderful wildlife. Our experts will explain everything about the two poles as you watch the penguins in Antarctica or whales and polar bears in the Arctic. There's no greater adventure than travelling to the ends of the earth. A once-in-a-lifetime experience!

Cultural journeys

Our cultural journeys will help you discover ancient civilisations: India, Thailand, Egypt and many more. Visit temples, palaces and ancient ruins – just remember to bring your camera! Get to know local ways of life by exploring markets, trying exotic foods and meeting local people.

Trekking tours

We have trekking holidays to famous places such as Machu Picchu or the Everest Base Camp Trek, as well as some nearer to home in the Highlands of Scotland. You don't need to be very sporty, just fairly fit. You'll have a great time enjoying nature with a group of new friends. Some of the holidays include camping, but we'll transport the tents for you!

Wildlife holidays

We organise small-group tours to get closer to nature in Africa, Asia or South America. Go on safari in Africa and watch lions and giraffes. Meet the famous turtles of the Galapagos Islands. Look for tigers in India, or take an elephant safari in Sri Lanka. We use local guides and stay in a range of accommodation, from tents to tree houses.

SubQuestion No : 15

Q.15 The phrase 'nine-to-five routine' most likely refers to:

- Ans** ☒ A. a commute to and from work
- ☒ B. a daily work schedule
- ☒ C. working long hours
- ☒ D. a job that requires a lot of travel



Question ID : 630680806010

Option 1 ID : 6306803157694

Option 2 ID : 6306803157693

Option 3 ID : 6306803157692

Option 4 ID : 6306803157695

Status : Answered

Chosen Option : B

Section : Reasoning

Q.1 In a certain code language, 'he is tall' is written as 'df rt gy' and 'trees are tall' is written as 'gy fg cv'. What is the code for 'tall' in that language?

- Ans
- ☒ A. cv
 - ☒ B. rt
 - ☒ C. fg
 - ☒ D. gy

Question ID : 630680251542

Option 1 ID : 630680976173

Option 2 ID : 630680976174

Option 3 ID : 630680976172

Option 4 ID : 630680976171

Status : Answered

Chosen Option : D

Q.2 Which of the following options can replace the question mark (?) and complete the given number series?
7, 10, 16, 19, 25, 28, ?

- Ans
- ☒ A. 34
 - ☒ B. 35
 - ☒ C. 31
 - ☒ D. 30

Question ID : 630680239262

Option 1 ID : 630680928058

Option 2 ID : 630680928059

Option 3 ID : 630680928057

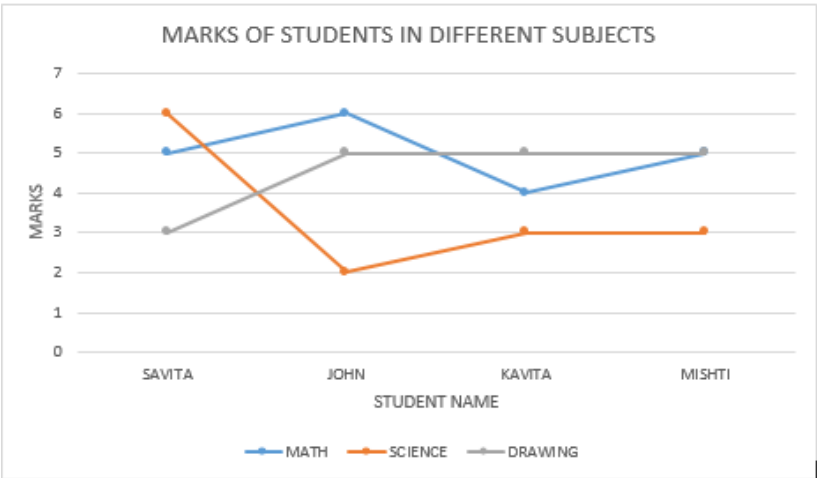
Option 4 ID : 630680928056

Status : Answered

Chosen Option : A



Q.3



Study the given line graph and answer the following question.
If the maximum marks in Science is 6, what is the percentage of marks of Kavita in Science?

- Ans ☒ A. 50
- ☒ B. 45
- ☒ C. 40
- ☒ D. 65

Question ID : 630680409148

Option 1 ID : 6306801595439

Option 2 ID : 6306801595440

Option 3 ID : 6306801595438

Option 4 ID : 6306801595437

Status : Answered

Chosen Option : A

Q.4 In this question, a statement is followed by two conclusions. Find which conclusion is true based on the given statement.

Statement: $X < W$, $V \geq Y$, $Y > W$, $Z = V$

- Conclusions:
- I. $Y > X$
- II. $Z < W$

- Ans ☒ A. Only conclusion I is true.
- ☒ B. Neither conclusion I nor II is true.
- ☒ C. Both conclusions I and II are true.
- ☒ D. Only conclusion II is true.

Question ID : 630680630225

Option 1 ID : 6306802466923

Option 2 ID : 6306802466926

Option 3 ID : 6306802466925

Option 4 ID : 6306802466924

Status : Answered

Chosen Option : A

Q.5 Select the triad that follows the same pattern as the one followed by the two triads given below. Both triads follow the same pattern.
RV-ZD-HL
DH-LP-TX

- Ans ☒ A. CG-KO-SW
- ☒ B. UH-KF-HY
- ☒ C. CG-KO-JK
- ☒ D. WR-KO-ML

Question ID : 630680919677

Option 1 ID : 6306803603906

Option 2 ID : 6306803603909

Option 3 ID : 6306803603907

Option 4 ID : 6306803603908

Status : Answered

Chosen Option : A

Q.6 Refer to the following letter, symbol series and answer the question that follows.
Counting to be done from left to right only.
(Left) O # \$ R V @ + ^ G U Y T + ! U > \$ % Y W E % @ G I # > N G D + (Right)
How many such symbols are there, each of which is immediately preceded by a symbol and also immediately followed by a symbol?

- Ans ☒ A. Three
- ☒ B. None
- ☒ C. Two
- ☒ D. One

Question ID : 630680742989

Option 1 ID : 6306802912267

Option 2 ID : 6306802912268

Option 3 ID : 6306802912266

Option 4 ID : 6306802912269

Status : Answered

Chosen Option : C

Q.7 A, B, C, D, E, and F are sitting around a circular table facing the centre. D is an immediate neighbour of B and A. C sits second to the right of B. F sits second to the left of E. Who sits second to the right of E?

- Ans ☒ A. C
- ☒ B. D
- ☒ C. B
- ☒ D. A

Question ID : 630680335629

Option 1 ID : 6306801305410

Option 2 ID : 6306801305411

Option 3 ID : 6306801305412

Option 4 ID : 6306801305409

Status : Answered

Chosen Option : B

Q.8 In a certain code language,

A + B means 'A is the son of B',
A # B means 'A is the brother of B',
A – B means 'A is the wife of B' and
A @ B means 'A is the father of B'.

How is D related to N if 'D # E + F – M @ N'?

- Ans
- ☒ A. Son
 - ☒ B. Husband
 - ☒ C. Father
 - ☒ D. Brother

Question ID : 630680482212

Option 1 ID : 6306801883362

Option 2 ID : 6306801883363

Option 3 ID : 6306801883365

Option 4 ID : 6306801883364

Status : Answered

Chosen Option : D

Q.9 Read the given statements and conclusions carefully. Assuming that the information given in the statements is true, even if it appears to be at variance with commonly known facts, decide which of the given conclusions logically follow(s) from the statements.

Statements:
All sneakers are trousers.
No trouser is a watch.

Conclusions:
(I) No sneaker is a watch.
(II) Some watches may be trousers.

- Ans
- ☒ A. Only conclusion (I) follows.
 - ☒ B. Only conclusion (II) follows.
 - ☒ C. Both conclusion (I) and (II) follow.
 - ☒ D. Neither conclusion (I) nor (II) follows.

Question ID : 630680422371

Option 1 ID : 6306801647920

Option 2 ID : 6306801647921

Option 3 ID : 6306801647922

Option 4 ID : 6306801647923

Status : Answered

Chosen Option : A

Q.10 A, B, C, D, E and F live on six different floors of the same building. The lowermost floor in the building is numbered 1, the floor above it, number 2 and so on till the topmost floor is numbered 6. A lives on an even numbered floor but not on floor number 2. Only two people live above A. F lives on an even numbered floor below A. C lives immediately below D. E does not live on the lowermost floor. How many people live between C and B?

- Ans
- ☒ A. Three
 - ☒ B. Four
 - ☒ C. Two
 - ☒ D. One

Question ID : 630680151875

Option 1 ID : 630680587546

Option 2 ID : 630680587547

Option 3 ID : 630680587545

Option 4 ID : 630680587544

Status : Answered

Chosen Option : A

Q.11 In a certain code language, 'BELT' is coded as '3719' and 'LAMP' is coded as '4678'. What is the code for 'L' in that language?

- Ans
- ☐

A. 4
- ☐

B. 8
- ☒

C. 7
- ☐

D. 1

Question ID : 630680410691

Option 1 ID : 6306801601522

Option 2 ID : 6306801601523

Option 3 ID : 6306801601520

Option 4 ID : 6306801601521

Status : Answered

Chosen Option : C

Q.12 Which of the following options can replace the question mark (?) and complete the given number series?
85, 111, 145, 187, ?

- Ans
- ☐

A. 245
- ☒

B. 237
- ☐

C. 240
- ☐

D. 235

Question ID : 630680239266

Option 1 ID : 630680928074

Option 2 ID : 630680928073

Option 3 ID : 630680928072

Option 4 ID : 630680928075

Status : Answered

Chosen Option : D

Q.13 DIMQ is related to FLQV in a certain way based on the English alphabetical order. In the same way, PRTU is related to RUXZ. To which of the following is KNOM related, following the same logic?

- Ans
- ☐

A. MRRS
- ☐

B. NRSS
- ☐

C. LQRS
- ☒

D. MQSR

Question ID : 630680349654

Option 1 ID : 6306801360905

Option 2 ID : 6306801360908

Option 3 ID : 6306801360906

Option 4 ID : 6306801360907

Status : Answered

Chosen Option : D

Q.14 Naval starts from Point Y and drives 6 km towards the South. He then takes a left turn, drives 29 km, turns right and drives 27 km. He then takes a right turn and drives 7 km. He takes a right turn and drives 13 km. He then turns right, drives 15 km, turns left and drives 20 km to stop at Point Z. How far (shortest distance) and towards which direction should he drive in order to reach Point Y again? (All turns are 90 degrees turns only unless specified)

Ans ☒ A. 36 km towards East
 ☒ B. 44 km towards East
 ☒ C. 37 km towards West
 ☒ D. 36 km towards West

Question ID : 630680240782
Option 1 ID : 630680933605
Option 2 ID : 630680933603
Option 3 ID : 630680933604
Option 4 ID : 630680933606
Status : Answered
Chosen Option : C

Q.15 What should come in place of the question mark (?) in the given series in order to make it logically complete?
2B7H 4K9J 8T11L ?

Ans ☒ A. 16C13N
 ☒ B. 16D14M
 ☒ C. 16D13M
 ☒ D. 16B13N

Question ID : 630680151156
Option 1 ID : 630680584685
Option 2 ID : 630680584686
Option 3 ID : 630680584687
Option 4 ID : 630680584684
Status : Not Attempted and Marked For Review
Chosen Option : --

Section : Quantitative Aptitude

Q.1 A, B and C can finish a work in 10, 15 and 30 days, respectively. In how many days can B finish the work if he is assisted by A and C on every third day?

Ans ☒ A. 9
 ☒ B. 10
 ☒ C. 8
 ☒ D. 12

Question ID : 630680477700
Option 1 ID : 6306801865950
Option 2 ID : 6306801865949
Option 3 ID : 6306801865951
Option 4 ID : 6306801865948
Status : Not Answered
Chosen Option : --

Q.2 Karan travels the first 180 km of a journey at the speed of 54 km/h and the next 180 km at the speed of 60 km/h. Find his average speed for the entire journey.

Ans

☐ A. $52\frac{16}{19}$ km/h

☐ B. $54\frac{16}{19}$ km/h

☒ C. $56\frac{16}{19}$ km/h

☐ D. $58\frac{16}{19}$ km/h

Question ID : 630680138389

Option 1 ID : 630680535794

Option 2 ID : 630680535795

Option 3 ID : 630680535796

Option 4 ID : 630680535797

Status : Answered

Chosen Option : C

Q.3 A company earns a profit (in ₹) that is distributed among the company's three partners in the ratio of 3 : 5 : 14. If the difference between the smallest and the largest shares is ₹18137, the total profit (in ₹) of the company is:

Ans ☐ A. 36327

☐ B. 36296

☒ C. 36274

☐ D. 36261

Question ID : 630680789359

Option 1 ID : 6306803093217

Option 2 ID : 6306803093218

Option 3 ID : 6306803093216

Option 4 ID : 6306803093219

Status : Answered

Chosen Option : C

Q.4 There are a total 80 distinct books on a shelf such as 26 Math books, 24 English books, and 30 Biology books. One book is chosen at random. What is the probability that the chosen book is NOT an English book?

Ans

☐ A. $\frac{3}{8}$

☐ B. $\frac{4}{9}$

☐ C. $\frac{3}{10}$

☒ D. $\frac{7}{10}$

Question ID : 630680373689

Option 1 ID : 6306801456030

Option 2 ID : 6306801456029

Option 3 ID : 6306801456027

Option 4 ID : 6306801456028

Status : Not Answered

Chosen Option : --



Q.5 Two dice are thrown simultaneously and the sum of the numbers obtained is found to be 8. The probability that the number 5 has appeared at least once is:

Ans

☒ A. $\frac{1}{6}$

☒ B. $\frac{3}{5}$

☒ C. $\frac{2}{5}$

☒ D. $\frac{1}{2}$

Question ID : 630680183207

Option 1 ID : 630680709900

Option 2 ID : 630680709899

Option 3 ID : 630680709897

Option 4 ID : 630680709898

Status : Not Answered

Chosen Option : --

Q.6 A boatman goes 2 km against the current of the stream in 1 hour and goes 1 km along with the current in 15 minutes. How long will it take to go 5 km in stationary water?

Ans

☒ A. 1 hour

☒ B. 1 hour 30 minutes

☒ C. 1 hour 15 minutes

☒ D. 1 hour 40 minutes

Question ID : 630680186801

Option 1 ID : 630680724153

Option 2 ID : 630680724155

Option 3 ID : 630680724154

Option 4 ID : 630680724156

Status : Not Answered

Chosen Option : --

Q.7 A trader marked the price of his commodity so as to include a profit of 20%. He allowed a discount of 15% on the marked price. If the selling price was ₹4,284, find the cost price of the commodity.

Ans

☒ A. ₹4,200

☒ B. ₹4,110

☒ C. ₹4,100

☒ D. ₹4,900

Question ID : 630680447530

Option 1 ID : 6306801747376

Option 2 ID : 6306801747374

Option 3 ID : 6306801747373

Option 4 ID : 6306801747375

Status : Not Answered

Chosen Option : --



Q.8 A, B and C together finish work in 4 days. If A alone can finish the same work in 12 days and B in 18 days, find how long (in days) will C take to finish the work?

- Ans ☒ A. 8
☒ B. 9
☒ C. 10
☒ D. 11

Question ID : 630680659759

Option 1 ID : 6306802582979

Option 2 ID : 6306802582978

Option 3 ID : 6306802582980

Option 4 ID : 6306802582981

Status : Not Answered

Chosen Option : --

Q.9 जब एक अभिनत सिक्के को उछाला जाता है, तो एक चित आने की प्रायिकता $\frac{2}{5}$ है। यदि सिक्के को दो बार उछाला जाता है, तो दो पट आने की प्रायिकता क्या होगी?

- Ans ☒ A. $\frac{9}{25}$
☒ B. $\frac{1}{8}$
☒ C. $\frac{4}{25}$
☒ D. $\frac{4}{5}$

Question ID : 630680182004

Option 1 ID : 630680705239

Option 2 ID : 630680705238

Option 3 ID : 630680705240

Option 4 ID : 630680705241

Status : Answered

Chosen Option : D

Q.10 If 20% of a number is added to 120, then the result is the same number. 70% of the same number is:

- Ans ☒ A. 125
☒ B. 105
☒ C. 225
☒ D. 157.5

Question ID : 630680573843

Option 1 ID : 6306802244241

Option 2 ID : 6306802244240

Option 3 ID : 6306802244242

Option 4 ID : 6306802244243

Status : Answered

Chosen Option : D

Q.11 The average of 10 observations is 40. It was realised later that an observation was misread as 40 in place of 49. Find the correct average.

Ans

✗ A. 39.9

✗ B. 43.9

✓ C. 40.9

✗ D. 41.9

Question ID : 630680657306

Option 1 ID : 6306802573167

Option 2 ID : 6306802573169

Option 3 ID : 6306802573166

Option 4 ID : 6306802573168

Status : Answered

Chosen Option : C

Q.12 The population of a village was 110000. It increased by 5% in the first year and increased by 30% in the second year. Its population after two years is _____.

Ans

✓ A. 150150

✗ B. 148500

✗ C. 115500

✗ D. 143000

Question ID : 630680591514

Option 1 ID : 6306802314523

Option 2 ID : 6306802314526

Option 3 ID : 6306802314524

Option 4 ID : 6306802314525

Status : Answered

Chosen Option : A

Q.13 The average of the marks of 13 students in a class is 40. If the marks of each student are doubled, find the new average?

Ans

✗ A. 40

✓ B. 80

✗ C. 26

✗ D. 13

Question ID : 630680573386

Option 1 ID : 6306802242413

Option 2 ID : 6306802242412


Option 3 ID : 6306802242415

Option 4 ID : 6306802242414

Status : Answered

Chosen Option : C

https://cdn.digialm.com/per/g01/pub/1258/touchstone/AssessmentQPHTMLMode1/1258O24260/1258O24260S2D130/1721646165...

TeachingNinja.in

Q.14 What sum (in ₹) will earn a simple interest of ₹960 in 2 years at 20% per year rate of interest?

- Ans ☒ A. 384
☒ B. 1200
☒ C. 2400
☒ D. 4800

Question ID : 630680665876

Option 1 ID : 6306802607067

Option 2 ID : 6306802607065

Option 3 ID : 6306802607064

Option 4 ID : 6306802607066

Status : Answered

Chosen Option : C

Q.15 A, B, C, and D are four partners in a business. A's investment is two-thirds of D's investment. B and C invest equal amounts and C's investment is half of D's investment. If they earn ₹94.4 lakhs at the end of one year, then find the total share (in lakhs rupee) of A and B put together.

- Ans ☒ A. 44.3
☒ B. 41.3
☒ C. 40.3
☒ D. 43.3

Question ID : 630680915242

Option 1 ID : 6306803586015

Option 2 ID : 6306803586012

Option 3 ID : 6306803586013

Option 4 ID : 6306803586014

Status : Not Answered

Chosen Option : --

Section : General Knowledge

Q.1 'दोआब' क्षेत्र किन दो नदियों के संगम से बना है?

- Ans ☒ A. ब्रह्मपुत्र और महानदी
☒ B. गंगा और यमुना
☒ C. गोदावरी और कृष्णा
☒ D. नर्मदा और ताप्ती

Question ID : 630680648986

Option 1 ID : 6306802541104

Option 2 ID : 6306802541105

Option 3 ID : 6306802541106

Option 4 ID : 6306802541103

Status : Not Answered

Chosen Option : --

Q.2 The full form of IOA is _____.

- Ans ☒ A. India Olympic Association
☒ B. Indian Olympic Association
☒ C. Indian Olympic Agency
☒ D. India Olympic Agency

Question ID : 63068059820
Option 1 ID : 630680230851
Option 2 ID : 630680230850
Option 3 ID : 630680230852
Option 4 ID : 630680230853
Status : Answered
Chosen Option : B

Q.3 नीति आयोग की रिपोर्ट के अनुसार, 2013-14 और 2022-23 के बीच उत्तर प्रदेश में कितने व्यक्ति बहुआयामी गरीबी से सफलतापूर्वक बाहर निकले?

- Ans ☒ A. 4.12 करोड़
☒ B. 7.26 करोड़
☒ C. 2.5 करोड़
☒ D. 5.94 करोड़

Question ID : 630680780428
Option 1 ID : 6306803058804
Option 2 ID : 6306803058806
Option 3 ID : 6306803058803
Option 4 ID : 6306803058805
Status : Answered
Chosen Option : B

Q.4 Which city will host the upcoming BRICS Summit in October 2024?

- Ans ☒ A. New Delhi, India
☒ B. Cairo, Egypt
☒ C. Tehran, Iran
☒ D. Kazan, Russia

Question ID : 630680807139
Option 1 ID : 6306803162170
Option 2 ID : 6306803162171
Option 3 ID : 6306803162172
Option 4 ID : 6306803162169
Status : Not Answered
Chosen Option : --

Q.5 What is the term used when there is difference between the country's export and import of goods in trading?

- Ans ☒ A. Balance of trade
☒ B. Symmetry in trade
☒ C. Equity of trade
☒ D. Imbalance of Trade

Question ID : 630680133451
Option 1 ID : 630680516780
Option 2 ID : 630680516779
Option 3 ID : 630680516781
Option 4 ID : 630680516778
Status : Answered
Chosen Option : A

Q.6 Which city is the host city for the 2024 UN Climate Change Conference (COP29)?

- Ans

A. Baku, Azerbaijan

B. Rio de Janeiro, Brazil

C. Sharm El Sheik, Egypt

D. Dubai, United Arab Emirates
- Question ID : 630680807136

Option 1 ID : 6306803162159

Option 2 ID : 6306803162160

Option 3 ID : 6306803162158

Option 4 ID : 6306803162157

Status : Marked For Review

Chosen Option : A
- Q.7 कोई सूक्ष्म वित्त संस्थान किन माध्यमों के द्वारा सामाजिक प्रभाव और संधारणीयता (Sustainability) से जुड़ी चिंताओं को हल कर सकता है?
- Ans

A. लाभ और शेयरधारक मूल्य को अधिकाधिक बढ़ाकर

B. वित्तीय समावेशन और गरीबी उन्मूलन को प्राथमिकता देकर

C. आक्रामक विकास रणनीतियों को अपनाकर

D. स्ट्रेबाजी से जुड़े वित्तीय क्रियाकलापों में शामिल होकर

Question ID : 630680720440

Option 1 ID : 6306802823158

Option 2 ID : 6306802823159

Option 3 ID : 6306802823161

Option 4 ID : 6306802823160

Status : Answered

Chosen Option : B

Q.8 In which state is the Vindhyachal Thermal Power Station located?

Ans

A. Uttar Pradesh

B. Maharashtra

C. Madhya Pradesh

D. Rajasthan

Question ID : 630680111996

Option 1 ID : 630680433712

Option 2 ID : 630680433710

Option 3 ID : 630680433713

Option 4 ID : 630680433711

Status : Answered

Chosen Option : D

Q.9 Siddarmaiah on 20 May 2023 became the 24th Chief Minister of _____.

Ans

A. Goa

B. Kerala

C. Tamil Nadu

D. Karnataka

Question ID : 630680809879

Option 1 ID : 6306803173098

Option 2 ID : 6306803173095

Option 3 ID : 6306803173097

Option 4 ID : 6306803173096

Status : Not Answered

Chosen Option : --

https://cdn.digialm.com//per/g01/pub/1258/touchstone/AssessmentQPHTMLMode1/1258O24260/1258O24260S2D

 Teachingninja.in

Q.10 How many stages of economic development did Rostow identify in 1956?

Ans ☒ A. 5

☒ B. 6

☒ C. 4

☒ D. 7

Question ID : 630680134869

Option 1 ID : 630680522294

Option 2 ID : 630680522295

Option 3 ID : 630680522296

Option 4 ID : 630680522297

Status : Not Answered

Chosen Option : --

Q.11 किस बैंक को 12 मार्च 2024 के अंत तक सभी इलेक्टोरल बॉन्ड (electoral bond) विवरणों का खुलासा करने के निर्देश दिए गए थे तथा ऐसा न करने पर उसके विरुद्ध अवमानना कार्यवाही की चेतावनी दी गई थी?

Ans ☒ A. स्टेट बैंक ऑफ इंडिया

☒ B. HDFC बैंक

☒ C. बैंक ऑफ बड़ौदा

☒ D. ICICI बैंक

Question ID : 630680809968

Option 1 ID : 6306803173416

Option 2 ID : 6306803173418

Option 3 ID : 6306803173415

Option 4 ID : 6306803173417

Status : Answered

Chosen Option : B

Q.12 समग्र मांग (AD) का सीधा संबंध निम्न से है:

A. उपभोग

B. निवेश

C. सरकारी खर्च

Ans ☒ A. B और C

☒ B. A और C

☒ C. A, B और C

☒ D. A और B

Question ID : 630680144753

Option 1 ID : 630680560056

Option 2 ID : 630680560055

Option 3 ID : 630680560057

Option 4 ID : 630680560054

Status : Answered

Chosen Option : C

Q.13 In which season do wet Westerlies arrive in the Mediterranean type of natural regions?

- Ans ☒ A. Autumn
☒ B. Summer
☒ C. Winter
☒ D. Spring

Question ID : 63068053134

Option 1 ID : 630680204639

Option 2 ID : 630680204638

Option 3 ID : 630680204640

Option 4 ID : 630680204641

Status : Answered

Chosen Option : D

Q.14 राजकोषीय घाटा क्या है?

- Ans ☒ A. सरकार के कुल व्यय और उधार को छोड़कर उसकी कुल प्राप्तियों के बीच का अंतर।
☒ B. सरकार के कुल व्यय और उसकी कुल प्राप्तियों और उधारों का योग।
☒ C. सरकार के कुल व्यय और उधार को छोड़कर उसकी कुल प्राप्तियों का योग।
☒ D. सरकार के कुल व्यय और उधार सहित उसकी कुल प्राप्तियों के बीच का अंतर।

Question ID : 63068056676

Option 1 ID : 630680218638

Option 2 ID : 630680218641

Option 3 ID : 630680218640

Option 4 ID : 630680218639

Status : Answered

Chosen Option : D

Q.15 नवंबर 2022 में भारतीय मूल की कितनी महिलाओं को ऑस्ट्रेलिया की 'सुपरस्टार ऑफ एसटीईएम (Superstars of STEM)' के रूप में चुना गया?

- Ans ☒ A. 1
☒ B. 3
☒ C. 5
☒ D. 2

Question ID : 630680303637

Option 1 ID : 6306801181117

Option 2 ID : 6306801181118

Option 3 ID : 6306801181119

Option 4 ID : 6306801181120

Status : Not Answered

Chosen Option : --

Section : Subject Knowledge

Q.1 National food security mission was started in _____.

- Ans ☒ A. 2014
☒ B. 2016
☒ C. 2019
☒ D. 2007

Question ID : 630680946873
Option 1 ID : 6306803712188
Option 2 ID : 6306803712189
Option 3 ID : 6306803712190
Option 4 ID : 6306803712191

Status : Answered

Chosen Option : D

Q.2 In which year was the power tiller first introduced in INDIA?

- Ans ☒ A. 1973
☒ B. 1960
☒ C. 1963
☒ D. 1975

Question ID : 630680926165
Option 1 ID : 6306803629633
Option 2 ID : 6306803629632
Option 3 ID : 6306803629631
Option 4 ID : 6306803629634

Status : Answered

Chosen Option : C

Q.3 Besides providing nitrogen, Azolla is used for weed control in which of the following?

- Ans ☒ A. Linseed
☒ B. Rice
☒ C. Castor
☒ D. Wheat

Question ID : 630680925724
Option 1 ID : 6306803627874
Option 2 ID : 6306803627872
Option 3 ID : 6306803627873
Option 4 ID : 6306803627871

Status : Answered

Chosen Option : B

Q.4 Which of the following is NOT an element of sustainable agriculture?

- Ans ☒ A. Agroforestry
☒ B. Crop rotation
☒ C. Permanent use of pesticide in farming
☒ D. Permaculture

Question ID : 630680926728
Option 1 ID : 6306803631853
Option 2 ID : 6306803631854
Option 3 ID : 6306803631856
Option 4 ID : 6306803631855

Status : Answered

Chosen Option : C

Q.5 The most devastating famine in India occurred in the which of the following states?

- Ans ☒ A. Bengal
☒ B. Punjab
☒ C. Bihar
☒ D. Uttar Pradesh

Question ID : 630680926784
Option 1 ID : 6306803632075
Option 2 ID : 6306803632073
Option 3 ID : 6306803632076
Option 4 ID : 6306803632074
Status : Answered
Chosen Option : A

Q.6 Which organisation facilitates the export of agricultural and processed food products from India?

- Ans ☒ A. Agricultural and Processed Food Products Export Development Authority (APEDA)
☒ B. Indian Council of Agricultural Research (ICAR)
☒ C. Food Corporation of India (FCI)
☒ D. Ministry of Agriculture

Question ID : 630680926746
Option 1 ID : 6306803631926
Option 2 ID : 6306803631928
Option 3 ID : 6306803631927
Option 4 ID : 6306803631925
Status : Answered
Chosen Option : A

Q.7 When Iron (Fe) contents in plants fall below or equal to _____ ppm, deficiency is likely to occur.

- Ans ☒ A. 40
☒ B. 20
☒ C. 50
☒ D. 100

Question ID : 630680925736
Option 1 ID : 6306803627920
Option 2 ID : 6306803627919
Option 3 ID : 6306803627921
Option 4 ID : 6306803627922
Status : Answered
Chosen Option : B

Q.8 Fern leaf in potato is caused due to the deficiency of which of the following?

- Ans ☒ A. Zinc
☒ B. Nitrogen
☒ C. Iron
☒ D. Manganese

Question ID : 630680925648
Option 1 ID : 6306803627570
Option 2 ID : 6306803627568
Option 3 ID : 6306803627567
Option 4 ID : 6306803627569
Status : Answered
Chosen Option : A



Q.9 FDI up to _____ is permitted under automatic route in specified activities of the agriculture and allied sectors.

- Ans ☒ A. 100
- ☒ B. 60
- ☒ C. 80
- ☒ D. 40

Question ID : 630680948454

Option 1 ID : 6306803718551

Option 2 ID : 6306803718549

Option 3 ID : 6306803718550

Option 4 ID : 6306803718548

Status : Not Attempted and Marked For Review

Chosen Option : --

Q.10 Which of the following is a variety of buckwheat?

- Ans ☒ A. Neelam
- ☒ B. Tokyo
- ☒ C. RD101
- ☒ D. Amber

Question ID : 630680924402

Option 1 ID : 6306803622684

Option 2 ID : 6306803622685

Option 3 ID : 6306803622686

Option 4 ID : 6306803622683

Status : Answered

Chosen Option : C

Q.11 The Janssen formula is used for the determination of which of the following?

- Ans ☒ A. Vertical pressure in shallow bins
- ☒ B. Denisty of liquids
- ☒ C. Lateral pressure in deep bins
- ☒ D. Lateral pressure in shallow bins

Question ID : 630680926639

Option 1 ID : 6306803631503

Option 2 ID : 6306803631504

Option 3 ID : 6306803631502

Option 4 ID : 6306803631501

Status : Answered

Chosen Option : A

Q.12 According to Whittaker 5 kingdom classification, Monera belongs to which family?

- Ans ☒ A. Multicellular eukaryotes
- ☒ B. Prokaryotes
- ☒ C. Unicellular eukaryotes
- ☒ D. Eukaryotes

Question ID : 630680926150

Option 1 ID : 6306803629574

Option 2 ID : 6306803629573

Option 3 ID : 6306803629571

Option 4 ID : 6306803629572

Status : Answered

Chosen Option : B

Q.13 Which of the following herbicides is known as Goal (trade name)?

- Ans ☒ A. Fluchloralin
☒ B. Oxyfluorfen
☒ C. Paraquat
☒ D. Pendimethalin

Question ID : 630680925717
Option 1 ID : 6306803627844
Option 2 ID : 6306803627845
Option 3 ID : 6306803627846
Option 4 ID : 6306803627843
Status : Answered
Chosen Option : A

Q.14 Which of the following Indian states is the largest producer of the cotton crop?

- Ans ☒ A. Gujarat
☒ B. Uttar Pradesh
☒ C. Madhya Pradesh
☒ D. Maharastra

Question ID : 630680925901
Option 1 ID : 6306803628575
Option 2 ID : 6306803628578
Option 3 ID : 6306803628577
Option 4 ID : 6306803628576
Status : Answered
Chosen Option : A

Q.15 Which of the following fungicides gives effective control of covered smut of barley?

- Ans ☒ A. Agrosan 5W
☒ B. Vitavax
☒ C. Sulphur dust
☒ D. Ceresan

Question ID : 630680925507
Option 1 ID : 6306803627077
Option 2 ID : 6306803627075
Option 3 ID : 6306803627078
Option 4 ID : 6306803627076
Status : Answered
Chosen Option : B

Q.16 According to the WTO's Trade Statistical Review (2022), India's share of global agricultural exports in 2021 was _____.

- Ans ☒ A. 4.4%
☒ B. 2.4%
☒ C. 3.4%
☒ D. 1.4%

Question ID : 630680948462
Option 1 ID : 6306803718591
Option 2 ID : 6306803718589
Option 3 ID : 6306803718590
Option 4 ID : 6306803718588
Status : Answered
Chosen Option : A

Q.17 Mutation due to change in gene is because of _____.

- Ans ☒ A. upgradation
☒ B. loss, degeneration and addition
☒ C. inheritance of acquired traits
☒ D. voluntary change

Question ID : 630680926157

Option 1 ID : 6306803629601

Option 2 ID : 6306803629599

Option 3 ID : 6306803629602

Option 4 ID : 6306803629600

Status : Answered

Chosen Option : B

Q.18 The portion of agricultural produce, which is sold in the market by the farmers, is called:

- Ans ☒ A. Marketed surplus
☒ B. Consumer's surplus
☒ C. Yield surplus
☒ D. Marketable surplus

Question ID : 630680926753

Option 1 ID : 6306803631954

Option 2 ID : 6306803631955

Option 3 ID : 6306803631956

Option 4 ID : 6306803631953

Status : Answered

Chosen Option : D

Q.19 Physical basis of life is _____.

- Ans ☒ A. ribosome
☒ B. protoplasm
☒ C. nucleus
☒ D. cytoplasm

Question ID : 630680946894

Option 1 ID : 6306803712275

Option 2 ID : 6306803712272

Option 3 ID : 6306803712274

Option 4 ID : 6306803712273

Status : Answered

Chosen Option : B

Q.20 _____ is an indication of how the speed of the traction device differs from the forward speed of the tractor.

- Ans ☒ A. Slip
☒ B. Traction
☒ C. Sinkage
☒ D. Traction efficiency

Question ID : 630680948382

Option 1 ID : 6306803718222

Option 2 ID : 6306803718223

Option 3 ID : 6306803718220

Option 4 ID : 6306803718221

Status : Answered

Chosen Option : D



Q.21 The difference between the field capacity and the soil moisture content in the root zone before application of irrigation water is known as _____.

- Ans
- ☒ A. base period
 - ☒ B. duty of water
 - ☒ C. delta
 - ☒ D. net irrigation requirement

Question ID : 630680942089

Option 1 ID : 6306803692915

Option 2 ID : 6306803692913

Option 3 ID : 6306803692912

Option 4 ID : 6306803692914

Status : Answered

Chosen Option : B

Q.22 The pheromone trap contains a lure, impregnated with synthetic chemicals, which attracts _____.

- Ans
- ☒ A. male moths
 - ☒ B. caterpillars
 - ☒ C. female bugs
 - ☒ D. female moths

Question ID : 630680925629

Option 1 ID : 6306803627530

Option 2 ID : 6306803627528

Option 3 ID : 6306803627527

Option 4 ID : 6306803627529

Status : Answered

Chosen Option : A

Q.23 Which of the following type of maize is suitable for double top cross hybrid?

- Ans
- ☒ A. Hi-starch
 - ☒ B. Shaktiman 1 and 2
 - ☒ C. Deccan
 - ☒ D. CoBc 1

Question ID : 630680924374

Option 1 ID : 6306803622580

Option 2 ID : 6306803622581

Option 3 ID : 6306803622582

Option 4 ID : 6306803622579

Status : Answered

Chosen Option : B

Q.24 In case of diminishing rate of substitution, the curve will:

- Ans
- ☒ A. be at convex to origin
 - ☒ B. be a straight line
 - ☒ C. be at concave to origin
 - ☒ D. pass through origin

Question ID : 630680925488

Option 1 ID : 6306803626999

Option 2 ID : 6306803627000

Option 3 ID : 6306803627001

Option 4 ID : 6306803627002

Status : Answered

Chosen Option : B

Q.25 What is the nitrogen content in anhydrous ammonia?

Ans ☒ A. 52%

☒ B. 82%

☒ C. 72%

☒ D. 62%

Question ID : 630680925825

Option 1 ID : 6306803628278

Option 2 ID : 6306803628275

Option 3 ID : 6306803628276

Option 4 ID : 6306803628277

Status : Answered

Chosen Option : B

Q.26 Which of the following nutrient(s) is/are immobile in plants?

Ans ☒ A. Na

☒ B. Ca and B

☒ C. K

☒ D. N

Question ID : 630680925798

Option 1 ID : 6306803628170

Option 2 ID : 6306803628168

Option 3 ID : 6306803628169

Option 4 ID : 6306803628167

Status : Answered

Chosen Option : B

Q.27 What is the main function of the rough endoplasmic reticulum?

Ans ☒ A. Chlorophyll synthesis

☒ B. Protein synthesis

☒ C. Fat synthesis

☒ D. Disease resistance

Question ID : 630680926139

Option 1 ID : 6306803629530

Option 2 ID : 6306803629528

Option 3 ID : 6306803629527

Option 4 ID : 6306803629529

Status : Answered

Chosen Option : B

Q.28 Which of the following farming types is mainly practised in India?

Ans ☒ A. Joint farming

☒ B. Peasant farming

☒ C. State farming

☒ D. Capitalistic farming

Question ID : 630680926708

Option 1 ID : 6306803631776

Option 2 ID : 6306803631773

Option 3 ID : 6306803631775

Option 4 ID : 6306803631774

Status : Answered

Chosen Option : D

Q.29 _____ as brand name for Indian cotton was launched on 7 October 2020.

- Ans ☒ A. Ahalya Cotton India
☒ B. Jyothi Cotton India
☒ C. Karthika Cotton India
☒ D. Kasturi Cotton India

Question ID : 630680948283
Option 1 ID : 6306803717831
Option 2 ID : 6306803717828
Option 3 ID : 6306803717829
Option 4 ID : 6306803717830
Status : Answered
Chosen Option : D

Q.30 The prevention of food adulteration Act was passed in which of the following years?

- Ans ☒ A. 1945
☒ B. 1964
☒ C. 1954
☒ D. 1944

Question ID : 630680926782
Option 1 ID : 6306803632065
Option 2 ID : 6306803632066
Option 3 ID : 6306803632067
Option 4 ID : 6306803632068
Status : Not Attempted and Marked For Review
Chosen Option : --

Q.31 Anthropometry deals with _____.

- Ans ☒ A. body dimensions of workers and their strength
☒ B. body dimensions of agricultural tools and their strength
☒ C. body dimensions of machine and its strength
☒ D. body dimensions of tool used by humans and their strength

Question ID : 630680948395
Option 1 ID : 6306803718281
Option 2 ID : 6306803718283
Option 3 ID : 6306803718282
Option 4 ID : 6306803718280
Status : Answered
Chosen Option : A

Q.32 Which is the biggest institution in relation to Agricultural Finance and Refinance?

- Ans ☒ A. Land Development Bank
☒ B. Regional Rural Bank
☒ C. NABARD
☒ D. Central Cooperative Bank

Question ID : 630680926743
Option 1 ID : 6306803631916
Option 2 ID : 6306803631913
Option 3 ID : 6306803631914
Option 4 ID : 6306803631915
Status : Answered
Chosen Option : C

Q.33 Photovoltaic solar cell is usually made up of which of the following?

- Ans ☒ A. Carbon
☒ B. Silicon
☒ C. Aluminium
☒ D. Gun metal

Question ID : 630680926605
Option 1 ID : 6306803631374
Option 2 ID : 6306803631375
Option 3 ID : 6306803631376
Option 4 ID : 6306803631373
Status : Answered
Chosen Option : A

Q.34 The heat liberated by the combustion of fuel is known as:

- Ans ☒ A. calorific value
☒ B. cetane number
☒ C. octane number
☒ D. thermal efficiency

Question ID : 630680926166
Option 1 ID : 6306803629636
Option 2 ID : 6306803629637
Option 3 ID : 6306803629635
Option 4 ID : 6306803629638
Status : Answered
Chosen Option : D

Q.35 Which of the following is called paddy leaf miner?

- Ans ☒ A. Sesamia inferens
☒ B. Hispa armigera
☒ C. Spodoptera mauritia
☒ D. Pachytiplosis oryzae

Question ID : 630680946831
Option 1 ID : 6306803712023
Option 2 ID : 6306803712020
Option 3 ID : 6306803712021
Option 4 ID : 6306803712022
Status : Answered
Chosen Option : B

Q.36 What is the ginning percentage in cotton?

- Ans ☒ A. 47%
☒ B. 33%
☒ C. 13%
☒ D. 53%

Question ID : 630680925904
Option 1 ID : 6306803628589
Option 2 ID : 6306803628587
Option 3 ID : 6306803628588
Option 4 ID : 6306803628590
Status : Answered
Chosen Option : B

Q.37 According to the State of Food Security and Nutrition in the World report, 2023, how many people experienced severe food insecurity?

Ans

A. 200 billion

B. 2.4 billion

C. 900 million

D. 1.8 billion

Question ID : 630680948447

Option 1 ID : 6306803718514

Option 2 ID : 6306803718512

Option 3 ID : 6306803718513

Option 4 ID : 6306803718515

Status : Answered

Chosen Option : D

Q.38 Blast of rice caused by:

Ans

A. Pythium

B. Cercospora

C. Xanthomonas

D. Pyricularia

Question ID : 630680946820

Option 1 ID : 6306803711983

Option 2 ID : 6306803711982

Option 3 ID : 6306803711980

Option 4 ID : 6306803711981

Status : Answered

Chosen Option : D

Q.39 _____ is the first commercial hybrid of sunflower.

Ans

A. KBSH 1

B. MSHF 1

C. APSH 11

D. BSH 1

Question ID : 630680947068

Option 1 ID : 6306803712974

Option 2 ID : 6306803712975

Option 3 ID : 6306803712972

Option 4 ID : 6306803712973

Status : Answered

Chosen Option : D

Q.40 Sessamum phyllody disease spreads through _____.

Ans

A. Nephotettix impicticeps

B. Orossius albicinctus

C. Nephotettix nigropictus

D. Jassus indicus

Question ID : 630680946816

Option 1 ID : 6306803711966

Option 2 ID : 6306803711964

Option 3 ID : 6306803711967

Option 4 ID : 6306803711965

Status : Answered

Chosen Option : A

https://cdn.digialm.com//per/g01/pub/1258/touchstone/AssessmentQPHTMLMode1/1258O24260/1258O24260S2D

 Teachingninja.in

Q.41 The power developed by an average pair of bullocks for doing usual farm work is:

- Ans ☒ A. 1 hp
☒ B. 0.1 hp
☒ C. 15 hp
☒ D. 10 hp

Question ID : 630680926164
Option 1 ID : 6306803629629
Option 2 ID : 6306803629627
Option 3 ID : 6306803629630
Option 4 ID : 6306803629628
Status : Answered
Chosen Option : A

Q.42 Which of the following types of cotton covers the largest area in India?

- Ans ☒ A. Brazilian cotton
☒ B. Indian cotton
☒ C. American cotton
☒ D. Chinese cotton

Question ID : 630680925914
Option 1 ID : 6306803628629
Option 2 ID : 6306803628628
Option 3 ID : 6306803628627
Option 4 ID : 6306803628630
Status : Answered
Chosen Option : C

Q.43 Which farm management system focuses on maximising output per unit of land?

- Ans ☒ A. Primitive subsistence farming
☒ B. Extensive subsistence farming
☒ C. Commercial farming
☒ D. Intensive subsistence farming

Question ID : 630680926801
Option 1 ID : 6306803632143
Option 2 ID : 6306803632141
Option 3 ID : 6306803632142
Option 4 ID : 6306803632144
Status : Answered
Chosen Option : D

Q.44 Which of the following bacteria is NOT responsible for nitrogen fixation?

- Ans ☒ A. E.Coli
☒ B. Rhizobium
☒ C. Azotobacter
☒ D. Azospirillum

Question ID : 630680926817
Option 1 ID : 6306803632205
Option 2 ID : 6306803632206
Option 3 ID : 6306803632207
Option 4 ID : 6306803632208
Status : Answered
Chosen Option : A

Q.45 What is the seed rate of buckwheat for 1 hectare?

- Ans ☒ A. 60-80 kg
☒ B. 10-20 kg
☒ C. 40-60 kg
☒ D. 75-95 kg

Question ID : 630680924407
Option 1 ID : 6306803622705
Option 2 ID : 6306803622704
Option 3 ID : 6306803622703
Option 4 ID : 6306803622706
Status : Answered
Chosen Option : C

Q.46 The Government of India decided to introduce 100% neem coating on all subsidised agricultural grade urea in _____.

- Ans ☒ A. 2015
☒ B. 2016
☒ C. 2014
☒ D. 2017

Question ID : 630680948597
Option 1 ID : 6306803719161
Option 2 ID : 6306803719162
Option 3 ID : 6306803719160
Option 4 ID : 6306803719163
Status : Not Answered
Chosen Option : --

Q.47 Which of the following statements is true with respect to *Ammannia baccifera*?

- i. It is classified as a wetland weed.
ii. It is classified as a dryland weed.
iii. It is adapted to withstand drought on account of mucilaginous nature of the stem.
iv. It is adapted to withstand drought on account hairy nature of the stem.

- Ans ☒ A. ii
☒ B. iv
☒ C. iii
☒ D. i

Question ID : 630680948249
Option 1 ID : 6306803717685
Option 2 ID : 6306803717687
Option 3 ID : 6306803717686
Option 4 ID : 6306803717684
Status : Not Answered
Chosen Option : --

Q.48 Under which of the following types of weed control methods is Chaining classified?

- Ans ☒ A. Chemical
☒ B. Physical
☒ C. Biological
☒ D. Cultural

Question ID : 630680925681
Option 1 ID : 6306803627701
Option 2 ID : 6306803627702
Option 3 ID : 6306803627700
Option 4 ID : 6306803627699
Status : Answered
Chosen Option : D

Q.49 One bale of cotton is equal to:

- Ans ☒ A. 180 kg
☒ B. 160 kg
☒ C. 170 kg
☒ D. 190 kg

Question ID : 630680925906
Option 1 ID : 6306803628597
Option 2 ID : 6306803628595
Option 3 ID : 6306803628596
Option 4 ID : 6306803628598
Status : Answered
Chosen Option : A

Q.50 Which of the following cell organelles act(s) as the site of the Krebs cycle?

- Ans ☒ A. Cell membrane
☒ B. Rough endoplasmic reticulum
☒ C. Lysosome
☒ D. Mitochondria

Question ID : 630680926132
Option 1 ID : 6306803629502
Option 2 ID : 6306803629501
Option 3 ID : 6306803629500
Option 4 ID : 6306803629499
Status : Answered
Chosen Option : D

Q.51 What are crops grown specifically to suppress the growth of weeds known as?

- Ans ☒ A. Skip crop
☒ B. Paired crop
☒ C. Smother crops
☒ D. Soiling crop

Question ID : 630680926716
Option 1 ID : 6306803631806
Option 2 ID : 6306803631805
Option 3 ID : 6306803631808
Option 4 ID : 6306803631807
Status : Answered
Chosen Option : C

Q.52

Tea yellow disease is caused in tea plants due to the deficiency of which of the following components?

Ans

X

A. Mo

X

B. Mg

X

C. N

✓

D. S

Question ID : 630680925778

Option 1 ID : 6306803628089

Option 2 ID : 6306803628090

Option 3 ID : 6306803628087

Option 4 ID : 6306803628088

Status : Answered

Chosen Option : C

Q.53

Which of the following agents can effectively control both fungal and bacterial diseases in plants?

Ans

X

A. Tetracycline

X

B. Mancozeb

X

C. Agrimycin

✓

D. Copper oxychloride

Question ID : 630680926148

Option 1 ID : 6306803629565

Option 2 ID : 6306803629563

Option 3 ID : 6306803629566

Option 4 ID : 6306803629564

Status : Answered

Chosen Option : A

Q.54

Which of the following pesticides is suitable for controlling white grub?

Ans

X

A. Aldicarb

X

B. Malathion

X

C. Deltamethrin

✓

D. Phorate

Question ID : 630680925538

Option 1 ID : 6306803627210

Option 2 ID : 6306803627207

Option 3 ID : 6306803627208

Option 4 ID : 6306803627209

Status : Answered

Chosen Option : B

Q.55

Who is known as the father of bacteriological technique?

Ans

X

A. Gram

X

B. Pasteur

X

C. Buchner

✓

D. Koch

Question ID : 630680926143

Option 1 ID : 6306803629545

Option 2 ID : 6306803629543


Option 3 ID : 6306803629546

Option 4 ID : 6306803629544

Status : Answered

Chosen Option : C

https://cdn.digialm.com/per/g01/pub/1258/touchstone/AssessmentQPHTMLMode1/1258O24260/1258O24260S2D130/1721646165...

Teachingninja.in

Q.56 Ribosomes, the macromolecular structures composed of rRNA and polypeptide chains, are synthesised by the:

Ans

✓ A. nucleolus

✗ B. nucleus

✗ C. cell wall

✗ D. cytoplasm

Question ID : 630680926128

Option 1 ID : 6306803629484

Option 2 ID : 6306803629483

Option 3 ID : 6306803629486

Option 4 ID : 6306803629485

Status : Answered

Chosen Option : B

Q.57 Which of the following plants is long day plant?

Ans

✗ A. Chrysanthemum

✗ B. Soybean

✗ C. Rice

✓ D. Spinach

Question ID : 630680895453

Option 1 ID : 6306803507924

Option 2 ID : 6306803507923

Option 3 ID : 6306803507922

Option 4 ID : 6306803507921

Status : Answered

Chosen Option : C

Q.58 When the volume of spray is greater than 400 litre per hectare, it is called as which type of spray?

Ans

✗ A. Ultra low volume spray

✓ B. High volume spray

✗ C. Low volume spray

✗ D. Medium volume spray

Question ID : 630680926167

Option 1 ID : 6306803629640

Option 2 ID : 6306803629641

Option 3 ID : 6306803629639

Option 4 ID : 6306803629642

Status : Answered

Chosen Option : B

Q.59 The number of piston rings on piston varies between ____.

Ans

✗ A. 7-12

✗ B. 12-15

✗ C. 1-3

✓ D. 3-7

Question ID : 630680946885

Option 1 ID : 6306803712238

Option 2 ID : 6306803712239

Option 3 ID : 6306803712236

Option 4 ID : 6306803712237

Status : Answered

Chosen Option : C

Q.60 *Claviceps fusiformis* causes _____ in pearl millet.

Ans ☒ A. Ergot

☒ B. Smut

☒ C. Blast

☒ D. Banded leafspot

Question ID : **630680947083**

Option 1 ID : **6306803713033**

Option 2 ID : **6306803713035**

Option 3 ID : **6306803713034**

Option 4 ID : **6306803713032**

Status : **Answered**

Chosen Option : **A**

