



Teachingninja.in



Latest Govt Job updates



Private Job updates



Free Mock tests available

Visit - teachingninja.in



Teachingninja.in

CGPDTM
Patent Examiner
Previous Year Paper
(Mains) Paper-I
25 Jan, 2024



DPIIT Exam 25th Jan 2024

Application No	
Candidate Name	
Roll No.	
Test Date	25/01/2024
Test Time	9:00 AM - 11:00 AM
Subject	Paper I

Section : General Knowledge And Current Affairs

Q.1 Kelucharan Mohapatra was an exponent of which dance?

- Options
1. Manipuri
 2. Odissi
 3. Bharatnatyam
 4. Kuchipudi

Question Type : MCQ

Question ID : 272171670

Option 1 ID : 272171823

Option 2 ID : 272171824

Option 3 ID : 272171822

Option 4 ID : 272171821

Status : Answered

Chosen Option : 1

Q.2 Consider the given statements about the National Anthem of Bharat and identify which of them is/are correct.

- A. It was first sung on 27th December, 1911, at the Calcutta session of Indian National Congress.
- B. It was adopted by the Constituent Assembly on 24 January, 1950.
- C. Playing time for the full version of National Anthem is approximately 52 seconds.
- D. It was written originally by Rabindra Nath Tagore in Hindi.

Choose the most appropriate answer from the options given below :

- Options
1. A, B and D only
 2. A, C and D only
 3. B and C only
 4. A, B and C only

Question Type : MCQ

Question ID : 272171669

Option 1 ID : 272171817

Option 2 ID : 272171819

Option 3 ID : 272171818

Option 4 ID : 272171820

Status : Answered

Chosen Option : 4



Q.3 First country to land at the North Pole of the Moon (Lunar Surface) is -

- Options**
1. Soviet Union
 2. U.S.A.
 3. China
 4. Bharat

Question Type : **MCQ**

Question ID : **272171683**

Option 1 ID : **272171874**

Option 2 ID : **272171873**

Option 3 ID : **272171876**

Option 4 ID : **272171875**

Status : **Answered**

Chosen Option : **2**

Q.4 Which two countries are connected through 'Karakoram highway'?

- Options**
1. Bharat- Bhutan
 2. China- Pakistan
 3. Bharat- Pakistan
 4. Bharat- China

Question Type : **MCQ**

Question ID : **272171676**

Option 1 ID : **272171846**

Option 2 ID : **272171848**

Option 3 ID : **272171845**

Option 4 ID : **272171847**

Status : **Answered**

Chosen Option : **4**

Q.5 Which Indian village received the title of 'Best Tourism Village' by UNWTO in October, 2023?

- Options**
1. Majuli
 2. Dhordo
 3. Kasel
 4. Nawanpind Sardaran

Question Type : **MCQ**

Question ID : **272171674**

Option 1 ID : **272171839**

Option 2 ID : **272171840**

Option 3 ID : **272171837**

Option 4 ID : **272171838**

Status : **Answered**

Chosen Option : **2**

Q.6 Who gifted the Shiv Dhanush to king Janak, broken by Lord Rama at Sita Swayamvar -

- Options
1. Parashuram
 2. Nandi
 3. Vishnu
 4. Shiv

Question Type : **MCQ**

Question ID : **272171668**

Option 1 ID : **272171814**

Option 2 ID : **272171816**

Option 3 ID : **272171815**

Option 4 ID : **272171813**

Status : **Answered**

Chosen Option : **1**

Q.7 The first Indian female wrestler to win an Olympic Medal is -

- Options
1. Sakshi Malik
 2. Geeta Phogat
 3. Anshu Malik
 4. Vinesh Phogat

Question Type : **MCQ**

Question ID : **272171684**

Option 1 ID : **272171880**

Option 2 ID : **272171877**

Option 3 ID : **272171878**

Option 4 ID : **272171879**

Status : **Answered**

Chosen Option : **2**

Q.8 Who is known as the father of 'White Revolution' in India?

- Options
1. K. N. Bahal
 2. V. Kurien
 3. M. S. Swaminathan
 4. B. P. Pal

Question Type : **MCQ**

Question ID : **272171666**

Option 1 ID : **272171806**

Option 2 ID : **272171807**

Option 3 ID : **272171805**

Option 4 ID : **272171808**

Status : **Answered**

Chosen Option : **2**



Q.9 Scientists have discovered world's eighth continent whose name is:-

- Options
1. Accessia
 2. Sweden
 3. Eurasia
 4. Zealandia

Question Type : **MCQ**
Question ID : **272171679**
Option 1 ID : **272171859**
Option 2 ID : **272171860**
Option 3 ID : **272171858**
Option 4 ID : **272171857**
Status : **Answered**
Chosen Option : **1**

Q.10 India's first fisheries 'Atal Incubation Centre' (AIC) has been established at -

- Options
1. Kerala
 2. Andhra Pradesh
 3. Tamilnadu
 4. Telangana

Question Type : **MCQ**
Question ID : **272171682**
Option 1 ID : **272171869**
Option 2 ID : **272171872**
Option 3 ID : **272171871**
Option 4 ID : **272171870**
Status : **Answered**
Chosen Option : **3**

Q.11 Identify the correct statements regarding G20 summit.

- A. Bharat hosted G20 summit, 2023 whose theme was One Earth, One Family, One Future
- B. Brazil will host G20 in 2024.
- C. European Union became the permanent member of G20 on 9th September, 2023
- D. Los Angeles, USA is the headquarter of G20.

Choose the most appropriate answer from the options given below :

- Options
1. A, B and C only
 2. A and B only
 3. B and D only
 4. A, B and D only

Question Type : **MCQ**
Question ID : **272171677**
Option 1 ID : **272171851**
Option 2 ID : **272171849**
Option 3 ID : **272171852**
Option 4 ID : **272171850**
Status : **Answered**
Chosen Option : **2**

Q.12 Joint Military 'Exercise Harimau Shakti-2023' was conducted between Bharat and which country at Umroi cantonment in Bharat?

- Options
1. Malaysia
 2. Sri Lanka
 3. Vietnam
 4. Thailand

Question Type : **MCQ**
Question ID : **272171675**
Option 1 ID : **272171841**
Option 2 ID : **272171843**
Option 3 ID : **272171844**
Option 4 ID : **272171842**
Status : **Answered**
Chosen Option : **1**

Q.13 India's 'First Green Energy Archaeological Site' is located in which State?

- Options
1. Karnataka
 2. Andhra Pradesh
 3. Tamil Nadu
 4. Kerala

Question Type : **MCQ**
Question ID : **272171678**
Option 1 ID : **272171855**
Option 2 ID : **272171854**
Option 3 ID : **272171856**
Option 4 ID : **272171853**
Status : **Answered**
Chosen Option : **1**

Q.14 The first 'Constitution Park' of India is built at -

- Options
1. Jaipur
 2. Delhi
 3. Varanasi
 4. Surat

Question Type : **MCQ**
Question ID : **272171681**
Option 1 ID : **272171866**
Option 2 ID : **272171865**
Option 3 ID : **272171868**
Option 4 ID : **272171867**
Status : **Answered**
Chosen Option : **1**

Q.15 In Bharat, July 26 is observed as ____ ?

- Options**
1. National Doctor's Day
 2. Kargil Vijay Diwas
 3. National Youth Day
 4. Navy Day

Question Type : **MCQ**

Question ID : **272171672**

Option 1 ID : **272171829**

Option 2 ID : **272171832**

Option 3 ID : **272171830**

Option 4 ID : **272171831**

Status : **Answered**

Chosen Option : **2**

Q.16 Recently the prime minister of India visited "Guruvayur Temple" in Kerala. The temple is known for which of the following Hindu God/Goddess?

- Options**
1. Goddess Lakshmi
 2. Lord Brahma
 3. Goddess Saraswati
 4. Lord Krishna

Question Type : **MCQ**

Question ID : **272171667**

Option 1 ID : **272171812**

Option 2 ID : **272171809**

Option 3 ID : **272171810**

Option 4 ID : **272171811**

Status : **Answered**

Chosen Option : **1**

Q.17 Who is the world's first woman amputee to climb Mount Vinson, the highest peak of Antarctica?

- Options**
1. Lydia Bradey
 2. Junko Tabei
 3. Arunima Sinha
 4. Bachendri Pal

Question Type : **MCQ**

Question ID : **272171673**

Option 1 ID : **272171836**

Option 2 ID : **272171834**

Option 3 ID : **272171833**

Option 4 ID : **272171835**

Status : **Answered**

Chosen Option : **3**

Q.18 In which field 'Katalin Kariko' and 'Drew Weissman' have received the Nobel Prize for the year 2023?

- Options
1. Chemistry
 2. Medicine / Physiology
 3. Physics
 4. Peace

Question Type : **MCQ**

Question ID : **272171680**

Option 1 ID : **272171862**

Option 2 ID : **272171861**

Option 3 ID : **272171863**

Option 4 ID : **272171864**

Status : **Answered**

Chosen Option : **2**

Q.19 Match List I with List II

LIST I (National Park)		LIST II (Location State)	
A.	Namdapha	I.	Goa
B.	Bhagwan Mahavir	II.	Assam
C.	Simlipal	III.	Arunachal Pradesh
D.	Orang National Park	IV.	Odisha

Choose the correct answer from the options given below:

- Options
1. A-III, B-I, C-II, D-IV
 2. A-II, B-I, C-IV, D-III
 3. A-III, B-I, C-IV, D-II
 4. A-IV, B-III, C-I, D-II

Question Type : **MCQ**

Question ID : **272171665**

Option 1 ID : **272171803**

Option 2 ID : **272171801**

Option 3 ID : **272171802**

Option 4 ID : **272171804**

Status : **Not Answered**

Chosen Option : **--**

Q.20 Match List I with List II

LIST I (State)		LIST II (Famous Indian State Festivals Names)	
A.	Telangana	I.	Hareli
B.	Assam	II.	Bathu Kamma
C.	Andhra Pradesh	III.	Bihu
D.	Chhattisgarh	IV.	Ugadi

Choose the correct answer from the options given below:

- Options
1. A-III, B-II, C-IV, D-I
 2. A-II, B-III, C-IV, D-I
 3. A-II, B-III, C-I, D-IV
 4. A-II, B-IV, C-III, D-I

Question Type : **MCQ**

Question ID : 272171671

Option 1 ID : 272171827

Option 2 ID : 272171826

Option 3 ID : 272171828

Option 4 ID : 272171825

Status : **Marked For Review**

Chosen Option : 3

Section : General Aptitude

Q.21 Find next number of series :

1, 2, 6, 36, 44, 440, ?

- Options
1. 452
 2. 460
 3. 470
 4. 462

Question Type : **MCQ**

Question ID : 272171692

Option 1 ID : 272171909

Option 2 ID : 272171910

Option 3 ID : 272171912

Option 4 ID : 272171911

Status : **Not Answered**

Chosen Option : --



Q.22 Read the following information carefully and answer the given question.

A team of five is to be selected from among five boys A, B, C, D and E and four girls P, Q, R and S.

Criteria for selection is.

A and S have to be together. P cannot be put with R. D and Q cannot go together. C and E have to be together. R cannot be put with B.

If two of the members have to be boys, the team will consist of -

- Options**
1. A, D, S, Q, R
 2. C, E, S, P, Q
 3. A, B, S, P, Q
 4. B, D, S, R, Q

Question Type : **MCQ**

Question ID : **272171696**

Option 1 ID : **272171926**

Option 2 ID : **272171928**

Option 3 ID : **272171925**

Option 4 ID : **272171927**

Status : **Marked For Review**

Chosen Option : **2**

Q.23 Which conclusion would follow on the basis of given statements?

Statements :-

No watch is coffee.

No coffee is machine.

Some apples are machines.

Conclusions :

I. No machine is watch.

II. All machines are watches.

- Options**
1. Only II conclusion follows
 2. Only I conclusion follows
 3. Neither I nor II follows
 4. Both I and II conclusion follow

Question Type : **MCQ**

Question ID : **272171687**

Option 1 ID : **272171890**

Option 2 ID : **272171889**

Option 3 ID : **272171892**

Option 4 ID : **272171891**

Status : **Answered**

Chosen Option : **3**



Q.24 Sumit is 20th from the left end of a row and Ankit is 12th from the right end of row.
If they interchanged their positions, then Ankit ranks become 10th from right end.
Find the total number of persons in the row?

- Options
1. 29
 2. 30
 3. 31
 4. 35

Question Type : **MCQ**
Question ID : **272171704**
Option 1 ID : **272171958**
Option 2 ID : **272171957**
Option 3 ID : **272171959**
Option 4 ID : **272171960**
Status : **Answered**
Chosen Option : **1**

Q.25 Choose the missing term/word in place of question mark (?)

BUCKET : ACTVBDJLDFSU : : BONUS : _____ ?

- Options
1. ACNPMOTVRT
 2. ACMNMOTVRT
 3. ACMNMOTURT
 4. SUNOB

Question Type : **MCQ**
Question ID : **272171691**
Option 1 ID : **272171907**
Option 2 ID : **272171906**
Option 3 ID : **272171908**
Option 4 ID : **272171905**
Status : **Not Answered**
Chosen Option : **--**

Q.26 M introduces N by saying, " He is the husband of the granddaughter of the father of my father." How is N related to M?

- Options
1. Brother
 2. Son
 3. Son-in-law
 4. Brother-in-law

Question Type : **MCQ**
Question ID : **272171695**
Option 1 ID : **272171921**
Option 2 ID : **272171923**
Option 3 ID : **272171924**
Option 4 ID : **272171922**
Status : **Marked For Review**
Chosen Option : **3**



Q.27 In given question, choose the missing term in place of question mark (?) on the basis of the relationship between the words given on the left/right side of the sign of analogy.

MDNT : 1423137 :: KKGK : ____ ?

- Options**
1. 16162016
 2. 16160216
 3. 16116206
 4. 16612016

Question Type : **MCQ**

Question ID : **272171702**

Option 1 ID : **272171950**

Option 2 ID : **272171951**

Option 3 ID : **272171952**

Option 4 ID : **272171949**

Status : **Answered**

Chosen Option : **1**

Q.28 At what time, between 4 o'clock and 5 o'clock, both the needles (Hour hand and minute hand) will coincide with each other?

- Options**
1. $15\frac{1}{11}$ min past 4
 2. $18\frac{4}{11}$ min past 4
 3. $21\frac{9}{11}$ min past 4
 4. $20\frac{1}{11}$ min past 4

Question Type : **MCQ**

Question ID : **272171693**

Option 1 ID : **272171913**

Option 2 ID : **272171916**

Option 3 ID : **272171915**

Option 4 ID : **272171914**

Status : **Not Answered**

Chosen Option : **--**

Q.29 Who amongst A, B, C, D and E is the shorterst?

I. D is shorter than E, but taller than C.

II. B is not a tall as A.

Options

1. If statement I and II together are not sufficient to answer the question

2. If statement II alone is sufficient to answer the question but Statement I alone is not sufficient

3. If statement I alone is sufficient to answer the question but Statement II alone is not Sufficient

4. If statement I and II together are sufficient to answer the question

Question Type : **MCQ**

Question ID : **272171694**

Option 1 ID : **272171920**

Option 2 ID : **272171918**

Option 3 ID : **272171917**

Option 4 ID : **272171919**

Status : **Answered**

Chosen Option : 1

Q.30 If in the word 'CONGREGATION' 1st and 3rd letters are interchanged, 2nd and 4th letters are interchanged, 5th and 7th letters are interchanged and this interchange goes on in the same manner then find the 10th letter from right in the new arrangement.

Options

1. E

2. G

3. P

4. C

Question Type : **MCQ**

Question ID : **272171703**

Option 1 ID : **272171956**

Option 2 ID : **272171954**

Option 3 ID : **272171953**

Option 4 ID : **272171955**

Status : **Not Answered**

Chosen Option : --



Q.31 Direction : Read the following information carefully :

Seven persons A, B, C, D, E, F & G came in a meeting room. G came just before B. Only three persons came between C and D. D came immediately after A. No one came between A and B such that B came before A. Only one person came between C and E.

Who came first in the meeting?

- Options
1. A
 2. D
 3. E
 4. C

Question Type : **MCQ**

Question ID : **272171690**

Option 1 ID : **272171904**

Option 2 ID : **272171903**

Option 3 ID : **272171902**

Option 4 ID : **272171901**

Status : **Answered**

Chosen Option : **3**

Q.32 I am facing South. I turn right and walk 15 m. Then I turn right again and walk 20 m. Then I turn left and walk 20 m and then after turning right I walk 30 m. Finally I again turn right and walk 70 m. In which direction am I from the starting point?

- Options
1. West
 2. North
 3. North-West
 4. North-East

Question Type : **MCQ**

Question ID : **272171685**

Option 1 ID : **272171882**

Option 2 ID : **272171881**

Option 3 ID : **272171884**

Option 4 ID : **272171883**

Status : **Answered**

Chosen Option : **4**

Q.33 If July 9th, 2013 falls on Sunday then Jan 7th, 2014 falls on which day?

- Options
1. Monday
 2. Friday
 3. Wednesday
 4. Sunday

Question Type : **MCQ**

Question ID : **272171688**

Option 1 ID : **272171895**

Option 2 ID : **272171894**

Option 3 ID : **272171893**

Option 4 ID : **272171896**

Status : **Answered**

Chosen Option : **4**



Q.34 Which assumption is implicit in the given statement?

Statement : Please consult me before making any decision on exports from the company.

Assumptions : I. You may take a wrong decision if you don't consult me.

II. It is important to take a right decision.

- Options
1. If neither I nor II is implicit
 2. If either I or II is implicit
 3. If only assumption II is implicit
 4. If both I and II are implicit

Question Type : **MCQ**

Question ID : **272171698**

Option 1 ID : **272171935**

Option 2 ID : **272171934**

Option 3 ID : **272171933**

Option 4 ID : **272171936**

Status : **Answered**

Chosen Option : **3**

Q.35 Directions : Study the following arrangement carefully and answer the question given below :

In a certain code language,

'write in paper' is coded as ' la sa ka'

'read and write' is coded as 'ka na pa'

'pen and paper' is coded as 'la na fa'

What may be code for 'write with pen'?

- Options
1. la na ka
 2. ka fa la
 3. ka na fa
 4. ka zo fa

Question Type : **MCQ**

Question ID : **272171686**

Option 1 ID : **272171888**

Option 2 ID : **272171885**

Option 3 ID : **272171886**

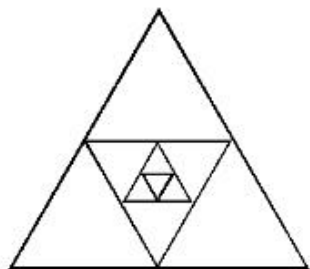
Option 4 ID : **272171887**

Status : **Answered**

Chosen Option : **2**



Q.36 Find maximum number of triangles in the figure given below.



- Options
1. 14
 2. 15
 3. 13
 4. 12

Question Type : **MCQ**

Question ID : 272171697

Option 1 ID : 272171931

Option 2 ID : 272171932

Option 3 ID : 272171930

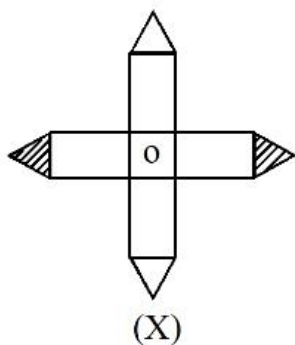
Option 4 ID : 272171929

Status : **Answered**

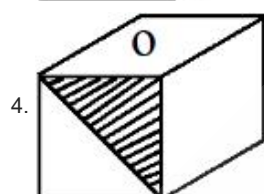
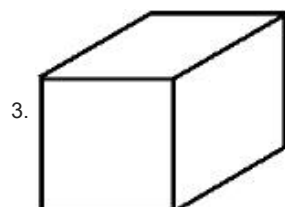
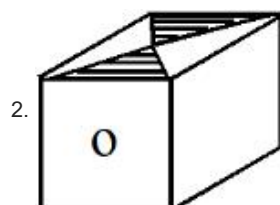
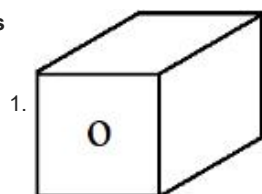
Chosen Option : **3**



Q.37 Choose the box that is similar to the box formed from the given sheet of paper (X).



Options



Question Type : MCQ

Question ID : 272171701

Option 1 ID : 272171948

Option 2 ID : 272171947

Option 3 ID : 272171946

Option 4 ID : 272171945

Status : Answered

Chosen Option : 1



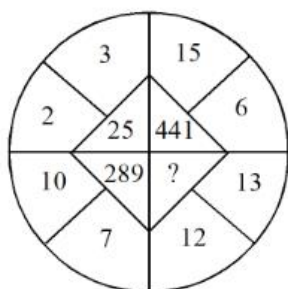
Q.38 Rearrange the unorganised letters to create meaningful words and then choose the one which is different from others.

- A. ORIN
- B. NADS
- C. POPCER
- D. DLOG

- Options 1. C
- 2. A
 - 3. B
 - 4. D

Question Type : **MCQ**
Question ID : **272171700**
Option 1 ID : **272171944**
Option 2 ID : **272171943**
Option 3 ID : **272171941**
Option 4 ID : **272171942**
Status : **Answered**
Chosen Option : **3**

Q.39 Find the missing number which replaces the question mark (?) in the given figure.



- Options 1. 725
- 2. 225
 - 3. 625
 - 4. 525

Question Type : **MCQ**
Question ID : **272171699**
Option 1 ID : **272171940**
Option 2 ID : **272171937**
Option 3 ID : **272171938**
Option 4 ID : **272171939**
Status : **Answered**
Chosen Option : **3**

Q.40 Which Conclusion would follow on the basis of the given statement.

Statement : $B > A \geq T > F = Y \leq S < D$

Conclusions :

I. $A > S$

II. $F < D$

- Options
1. Neither conclusion I nor conclusion II follows
 2. Only conclusion II follow
 3. Only conclusion I follows
 4. Both conclusion follows

Question Type : **MCQ**

Question ID : **272171689**

Option 1 ID : **272171900**

Option 2 ID : **272171898**

Option 3 ID : **272171897**

Option 4 ID : **272171899**

Status : **Answered**

Chosen Option : **2**

Section : **Elementary Mathematics**

Q.41 Find a number which should be subtracted from the sum of $\frac{5}{12}$ and $\frac{3}{5}$ to get $\frac{1}{4}$.

- Options
1. $\frac{7}{13}$
 2. $\frac{1}{3}$
 3. $\frac{23}{30}$
 4. $\frac{3}{7}$

Question Type : **MCQ**

Question ID : **272171721**

Option 1 ID : **2721711025**

Option 2 ID : **2721711028**

Option 3 ID : **2721711027**

Option 4 ID : **2721711026**

Status : **Answered**

Chosen Option : **3**

Q.42 The sum of radius and height of a solid cylinder is 37 m. If the total surface area of the cylinder is 1628 m^2 , then its volume (in m^3) is : (use $\pi = \frac{22}{7}$)

- Options
1. 3180
 2. 5240
 3. 4620
 4. 5680

Question Type : **MCQ**

Question ID : **272171713**

Option 1 ID : **272171993**

Option 2 ID : **272171995**

Option 3 ID : **272171994**

Option 4 ID : **272171996**

Status : **Answered**

Chosen Option : **3**

Q.43 From a group of 20 persons, one person left the group and a new person aged 30 years replaced him. As a result the average age of the group was reduced by $1\frac{1}{2}$ years. Age of the person who left the group (in years) is :

- Options
1. 60
 2. 58
 3. 64
 4. 55

Question Type : **MCQ**

Question ID : **272171715**

Option 1 ID : **2721711003**

Option 2 ID : **2721711002**

Option 3 ID : **2721711004**

Option 4 ID : **2721711001**

Status : **Answered**

Chosen Option : **1**

Q.44 Simplify: $24 \div 6 \times 2 + 2 - 4 \div 2$

- Options
1. 8
 2. 4
 3. 0
 4. 6



Question Type : **MCQ**

Question ID : **272171722**

Option 1 ID : **2721711032**

Option 2 ID : **2721711031**

Option 3 ID : **2721711029**

Option 4 ID : **2721711030**

Status : **Answered**

Chosen Option : **1**



Q.45 A sum of ₹ 1300 is divided amongst P, Q, R and S such that

$$\frac{\text{P's share}}{\text{Q's share}} = \frac{\text{Q's share}}{\text{R's share}} = \frac{\text{R's share}}{\text{S's share}} = \frac{2}{3}, \text{ then P's share is :}$$

- Options
1. ₹ 240
 2. ₹ 320
 3. ₹ 160
 4. ₹ 140

Question Type : **MCQ**

Question ID : 272171717

Option 1 ID : 2721711011

Option 2 ID : 2721711012

Option 3 ID : 2721711010

Option 4 ID : 2721711009

Status : **Answered**

Chosen Option : 3

Q.46 On simple interest a certain sum of money amounts to ₹ 1008 in 2 years and to ₹ 1164 in $3\frac{1}{2}$ years. What are the sum and the rate of interest?

- Options
1. ₹ 800, 12%
 2. ₹ 700, 12%
 3. ₹ 800, 13%
 4. ₹ 700, 13%

Question Type : **MCQ**

Question ID : 272171712

Option 1 ID : 272171991

Option 2 ID : 272171989

Option 3 ID : 272171992

Option 4 ID : 272171990

Status : **Answered**

Chosen Option : 3

Q.47 The radii of two concentric circles are in the ratio 1 : 2. Find the ratio of area of the outer circle to the area of the inner circle.

- Options
1. 8 : 1
 2. 4 : 1
 3. 3 : 1
 4. 2 : 1

Question Type : **MCQ**

Question ID : 272171714

Option 1 ID : 2721711000

Option 2 ID : 272171999

Option 3 ID : 272171998

Option 4 ID : 272171997

Status : **Answered**

Chosen Option : 2



Q.48 Nitin sells two articles for ₹ 4000 each with no profit, no loss in the entire transaction. If one article was sold at a gain of 25%, then the other is sold at a loss of :-

Options

1. $15\frac{3}{4}\%$
2. $18\frac{2}{9}\%$
3. 20%
4. $16\frac{2}{3}\%$

Question Type : **MCQ**

Question ID : **272171709**

Option 1 ID : **272171980**

Option 2 ID : **272171978**

Option 3 ID : **272171977**

Option 4 ID : **272171979**

Status : **Not Attempted and Marked For Review**

Chosen Option : --

Q.49 AD is a tangent to a circle with centre O at A. Chord BC when produced meets AD at D. If $\angle CAD = 38^\circ$ and $\angle CDA = 49^\circ$, then find $\angle BOC$.

Options

1. 60°
2. 120°
3. 80°
4. 110°

Question Type : **MCQ**

Question ID : **272171723**

Option 1 ID : **2721711033**

Option 2 ID : **2721711034**

Option 3 ID : **2721711036**

Option 4 ID : **2721711035**

Status : **Not Answered**

Chosen Option : --

Q.50 A man is walking at a speed of 6 km/hr. After every km he takes rest for 6 minutes. How much time will he take to cover a distance of 24 km?

Options

1. 5 hrs. 18 min.
2. 4 hrs. 24 min.
3. 6 hrs. 18 min.
4. 6 hrs. 24 min.

Question Type : **MCQ**

Question ID : **272171706**

Option 1 ID : **272171967**

Option 2 ID : **272171968**

Option 3 ID : **272171966**

Option 4 ID : **272171965**

Status : **Answered**

Chosen Option : 3



Q.51 A fruit seller has 500 oranges. In the first hour, he sells 32% of his oranges. In the second hour, he sells 40% of those that were left with him. How many oranges could he sell in the two hours?

- Options
1. 336
 2. 296
 3. 360
 4. 266

Question Type : **MCQ**

Question ID : **272171711**

Option 1 ID : **272171987**

Option 2 ID : **272171986**

Option 3 ID : **272171988**

Option 4 ID : **272171985**

Status : **Answered**

Chosen Option : **2**

Q.52 The sum of two numbers is 79. If the numbers differ by 23, then find the smaller number.

- Options
1. 35
 2. 56
 3. 28
 4. 51

Question Type : **MCQ**

Question ID : **272171716**

Option 1 ID : **2721711007**

Option 2 ID : **2721711005**

Option 3 ID : **2721711008**

Option 4 ID : **2721711006**

Status : **Answered**

Chosen Option : **3**

Q.53 The cost price of 40 pieces of an article is equal to the selling price of 30 pieces. What is the profit/loss percentage?

- Options
1. $33\frac{1}{3}\%$ loss
 2. $33\frac{1}{3}\%$ profit
 3. 25% profit
 4. 25% loss

Question Type : **MCQ**

Question ID : **272171710**

Option 1 ID : **272171984**

Option 2 ID : **272171982**

Option 3 ID : **272171981**

Option 4 ID : **272171983**

Status : **Answered**

Chosen Option : **2**

Q.54 By what percent above the cost price should an item be marked so that even after allowing a trade discount of 20% and a cash discount of 10%, there is a gain of 26%?

- Options
1. 78%
 2. 68%
 3. 56%
 4. 75%

Question Type : **MCQ**

Question ID : **272171708**

Option 1 ID : **272171976**

Option 2 ID : **272171974**

Option 3 ID : **272171973**

Option 4 ID : **272171975**

Status : **Not Attempted and Marked For Review**

Chosen Option : --

Q.55 B takes 12 more days than A to do a task. B and A start the task together but A leaves the task 12 days before its completion and B alone did the remaining work. If B does 60% of the overall task. How many days would B have taken to do the task if he had worked independently?

- Options
1. 38
 2. 36
 3. 16
 4. 18

Question Type : **MCQ**

Question ID : **272171705**

Option 1 ID : **272171962**

Option 2 ID : **272171961**

Option 3 ID : **272171963**

Option 4 ID : **272171964**

Status : **Not Attempted and Marked For Review**

Chosen Option : --

Q.56 A container contains 60 kg of milk. From this container 6 litre of liquid was taken out and replaced by water. This process was repeated further two times. The amount of milk left in the container is :

- Options
1. 40 litre
 2. 42 litre
 3. 43.74 litre
 4. 45.74 litre

Question Type : **MCQ**

Question ID : **272171719**

Option 1 ID : **2721711017**

Option 2 ID : **2721711018**

Option 3 ID : **2721711020**

Option 4 ID : **2721711019**

Status : **Answered**

Chosen Option : 3

Q.57 Six litre mixture having 90% milk and remaining water is mixed with four litre mixture having 80% milk and remaining water. Find the percentage of milk in the final mixture.

- Options**
1. 88%
 2. 85%
 3. 82%
 4. 86%

Question Type : **MCQ**

Question ID : **272171718**

Option 1 ID : **2721711016**

Option 2 ID : **2721711014**

Option 3 ID : **2721711013**

Option 4 ID : **2721711015**

Status : **Answered**

Chosen Option : **4**

Q.58 A sum of ₹ 15500 is lent partly at 5% and the remaining at 8% simple interest. If at the end of 3 years total interest earned is ₹ 3000, then the sum lent at 5% is :

- Options**
1. ₹ 7500
 2. ₹ 8400
 3. ₹ 8000
 4. ₹ 7200

Question Type : **MCQ**

Question ID : **272171724**

Option 1 ID : **2721711038**

Option 2 ID : **2721711040**

Option 3 ID : **2721711039**

Option 4 ID : **2721711037**

Status : **Answered**

Chosen Option : **3**

Q.59 If the mean of 18, 19, x , 25 and 26 is 21 then find the mean of 5, 11, 13, 19 and $(3x - 1)$.

- Options**
1. 18.8
 2. 19.6
 3. 20.6
 4. 21

Question Type : **MCQ**

Question ID : **272171720**

Option 1 ID : **2721711024**

Option 2 ID : **2721711023**

Option 3 ID : **2721711022**

Option 4 ID : **2721711021**

Status : **Answered**

Chosen Option : **2**

Q.60 Find the value of

$$\sin^2 10^\circ + \sin^2 20^\circ + \sin^2 30^\circ + \dots + \sin^2 80^\circ.$$

Options 1. 2

2. 3

3. 4

4. 1

Question Type : **MCQ**

Question ID : **272171707**

Option 1 ID : **272171971**

Option 2 ID : **272171970**

Option 3 ID : **272171969**

Option 4 ID : **272171972**

Status : **Answered**

Chosen Option : **3**

Section : English Language Proficiency



Comprehension:

Read the passage and the question that follow :

His uncle at the British barracks had told him when he first expressed the wish to be a sahib that he would have to go to school if he wanted to be one. And he had wept and cried to be allowed to go to school. But then his father had told him that schools were meant for the babus, not for the lowly sweepers. He hadn't quite understood the reason for that then. Later at the British barracks he realized why his father had not sent him to school. He was a sweeper's son and could never be a babu. Later still he realized that there was no school which would admit him because the parents of the other children would not allow their sons to be contaminated by the touch of the low-caste man's sons. How absurd, he thought, that was, since most of the Hindu children touched him willingly at hockey and wouldn't mind having him at school with them. But the masters wouldn't teach the outcastes, lest their fingers which guided the students across the text should touch the leaves of the outcastes' books and they be polluted. These old Hindus were cruel. He was a sweeper, he knew, but he could not consciously accept that fact. He had begun to work at the latrines at the age of six and resigned himself to the hereditary life of the craft, but he dreamed of becoming a sahib. Several times he had felt the impulse to study on his own. Life at the Tommies' barracks had fired his imagination. And he often sat in his spare time and tried to feel how it felt to read. Recently he had actually gone and bought a first primer of English. But his self-education hadn't proceeded beyond the alphabet. Today as he stood in the sun looking at the eager little boy dragging his brother to school, a sudden impulse came on him to ask the babu's son to teach him.

SubQuestion No : 61

Q.61 In the passage, why was no school willing to give admission to the boy?

- Options
1. Because he was poor
 2. Because he played Hockey
 3. Because he was Hindu
 4. Because he belonged to a lower-caste

Question Type : **MCQ**

Question ID : **272171728**

Option 1 ID : **2721711051**

Option 2 ID : **2721711049**

Option 3 ID : **2721711050**

Option 4 ID : **2721711052**

Status : **Answered**

Chosen Option : **4**



Comprehension:

Read the passage and the question that follow :

His uncle at the British barracks had told him when he first expressed the wish to be a sahib that he would have to go to school if he wanted to be one. And he had wept and cried to be allowed to go to school. But then his father had told him that schools were meant for the babus, not for the lowly sweepers. He hadn't quite understood the reason for that then. Later at the British barracks he realized why his father had not sent him to school. He was a sweeper's son and could never be a babu. Later still he realized that there was no school which would admit him because the parents of the other children would not allow their sons to be contaminated by the touch of the low-caste man's sons. How absurd, he thought, that was, since most of the Hindu children touched him willingly at hockey and wouldn't mind having him at school with them. But the masters wouldn't teach the outcasts, lest their fingers which guided the students across the text should touch the leaves of the outcasts' books and they be polluted. These old Hindus were cruel. He was a sweeper, he knew, but he could not consciously accept that fact. He had begun to work at the latrines at the age of six and resigned himself to the hereditary life of the craft, but he dreamed of becoming a sahib. Several times he had felt the impulse to study on his own. Life at the Tommies' barracks had fired his imagination. And he often sat in his spare time and tried to feel how it felt to read. Recently he had actually gone and bought a first primer of English. But his self-education hadn't proceeded beyond the alphabet. Today as he stood in the sun looking at the eager little boy dragging his brother to school, a sudden impulse came on him to ask the babu's son to teach him.

SubQuestion No : 62

Q.62 What was the hereditary occupation of the protagonist?

- Options
1. A schoolmaster
 2. A Babu
 3. A sweeper
 4. A gatekeeper

Question Type : **MCQ**

Question ID : **272171726**

Option 1 ID : **2721711041**

Option 2 ID : **2721711042**

Option 3 ID : **2721711044**

Option 4 ID : **2721711043**

Status : **Answered**

Chosen Option : **3**

Comprehension:

Read the passage and the question that follow :

His uncle at the British barracks had told him when he first expressed the wish to be a sahib that he would have to go to school if he wanted to be one. And he had wept and cried to be allowed to go to school. But then his father had told him that schools were meant for the babus, not for the lowly sweepers. He hadn't quite understood the reason for that then. Later at the British barracks he realized why his father had not sent him to school. He was a sweeper's son and could never be a babu. Later still he realized that there was no school which would admit him because the parents of the other children would not allow their sons to be contaminated by the touch of the low-caste man's sons. How absurd, he thought, that was, since most of the Hindu children touched him willingly at hockey and wouldn't mind having him at school with them. But the masters wouldn't teach the outcastes, lest their fingers which guided the students across the text should touch the leaves of the outcastes' books and they be polluted. These old Hindus were cruel. He was a sweeper, he knew, but he could not consciously accept that fact. He had begun to work at the latrines at the age of six and resigned himself to the hereditary life of the craft, but he dreamed of becoming a sahib. Several times he had felt the impulse to study on his own. Life at the Tommies' barracks had fired his imagination. And he often sat in his spare time and tried to feel how it felt to read. Recently he had actually gone and bought a first primer of English. But his self-education hadn't proceeded beyond the alphabet. Today as he stood in the sun looking at the eager little boy dragging his brother to school, a sudden impulse came on him to ask the babu's son to teach him.

SubQuestion No : 63

Q.63 Which instance in the given passage inspired the protagonist's desire to study from the Babu's son?

Options 1. He could read English

2. He saw an eager little boy dragging his brother to school

3. His father refused to let him sweep

4. He became a sweeper

Question Type : **MCQ**

Question ID : **272171727**

Option 1 ID : **2721711047**

Option 2 ID : **2721711046**

Option 3 ID : **2721711048**

Option 4 ID : **2721711045**

Status : **Answered**

Chosen Option : **1**



Comprehension:

Read the passage and the question that follow :

His uncle at the British barracks had told him when he first expressed the wish to be a sahib that he would have to go to school if he wanted to be one. And he had wept and cried to be allowed to go to school. But then his father had told him that schools were meant for the babus, not for the lowly sweepers. He hadn't quite understood the reason for that then. Later at the British barracks he realized why his father had not sent him to school. He was a sweeper's son and could never be a babu. Later still he realized that there was no school which would admit him because the parents of the other children would not allow their sons to be contaminated by the touch of the low-caste man's sons. How absurd, he thought, that was, since most of the Hindu children touched him willingly at hockey and wouldn't mind having him at school with them. But the masters wouldn't teach the outcasts, lest their fingers which guided the students across the text should touch the leaves of the outcasts' books and they be polluted. These old Hindus were cruel. He was a sweeper, he knew, but he could not consciously accept that fact. He had begun to work at the latrines at the age of six and resigned himself to the hereditary life of the craft, but he dreamed of becoming a sahib. Several times he had felt the impulse to study on his own. Life at the Tommies' barracks had fired his imagination. And he often sat in his spare time and tried to feel how it felt to read. Recently he had actually gone and bought a first primer of English. But his self-education hadn't proceeded beyond the alphabet. Today as he stood in the sun looking at the eager little boy dragging his brother to school, a sudden impulse came on him to ask the babu's son to teach him.

SubQuestion No : 64

Q.64 What is the most appropriate meaning of the word 'impulse'?

- Options
1. Guidance
 2. Imagination
 3. Resignation
 4. Urge

Question Type : **MCQ**

Question ID : **272171729**

Option 1 ID : **2721711055**

Option 2 ID : **2721711054**

Option 3 ID : **2721711056**

Option 4 ID : **2721711053**

Status : **Not Answered**

Chosen Option : --



Q.65 Fill in the blanks with appropriate propositions :

In his talk about the transient nature _____ existence, he briefly touched
_____ the subject _____ diseases.

- Options
1. of, upon, of
 2. of, down, over
 3. about, from, for
 4. to, over, for

Question Type : **MCQ**

Question ID : **272171741**

Option 1 ID : **2721711102**

Option 2 ID : **2721711103**

Option 3 ID : **2721711104**

Option 4 ID : **2721711101**

Status : **Not Answered**

Chosen Option : --

Q.66 Choose the correct form of the verb that agrees with the subject :

Neither the teacher nor the students _____ able to solve the equation.

- Options
1. was
 2. is
 3. were
 4. shall

Question Type : **MCQ**

Question ID : **272171733**

Option 1 ID : **2721711069**

Option 2 ID : **2721711071**

Option 3 ID : **2721711070**

Option 4 ID : **2721711072**

Status : **Not Answered**

Chosen Option : --

Q.67 Choose the correct form of the verb that agrees with the subject :

His pants _____ torn during the concert.

- Options
1. is
 2. were
 3. was
 4. would be

Question Type : **MCQ**

Question ID : **272171745**

Option 1 ID : **2721711120**

Option 2 ID : **2721711119**

Option 3 ID : **2721711118**

Option 4 ID : **2721711117**

Status : **Not Answered**

Chosen Option : --

Q.68 Fill in the blank with an appropriate question tag.

They are moving to Mumbai, _____ ?

- Options
1. are they
 2. aren't they
 3. can't they
 4. will they

Question Type : **MCQ**

Question ID : **272171730**

Option 1 ID : **2721711057**

Option 2 ID : **2721711059**

Option 3 ID : **2721711060**

Option 4 ID : **2721711058**

Status : **Answered**

Chosen Option : **1**

Q.69 Which of the following type of letter does one send along with a resume / CV?

- Options
1. Cover letter
 2. Letter of enquiry
 3. Informal letter
 4. Letter of complaint

Question Type : **MCQ**

Question ID : **272171736**

Option 1 ID : **2721711084**

Option 2 ID : **2721711081**

Option 3 ID : **2721711083**

Option 4 ID : **2721711082**

Status : **Not Answered**

Chosen Option : **--**



Q.70 Match the idioms in List I with their correct meanings in List II.

LIST I		LIST II	
A.	Oily tongue	I.	About to collapse
B.	On its last legs	II.	Energetic
C.	Quixotic project	III.	Flattering words
D.	Live-wire	IV.	Foolishly ideal

Choose the correct answer from the options given below:

- Options**
1. A-I, B-IV, C-II, D-III
 2. A-III, B-I, C-IV, D-II
 3. A-IV, B-III, C-II, D-I
 4. A-II, B-IV, C-I, D-III

Question Type : **MCQ**

Question ID : **272171735**

Option 1 ID : **2721711079**

Option 2 ID : **2721711080**

Option 3 ID : **2721711077**

Option 4 ID : **2721711078**

Status : **Not Answered**

Chosen Option : --

Q.71 The given sentence is in active voice. Choose the most appropriate version of the same in passive voice.

Read out the letter.

- Options**
1. Can you read the letter?
 2. Let the letter be read out.
 3. The letter needs to be read out.
 4. Will the letter be read out?

Question Type : **MCQ**

Question ID : **272171734**

Option 1 ID : **2721711075**

Option 2 ID : **2721711073**

Option 3 ID : **2721711074**

Option 4 ID : **2721711076**

Status : **Answered**

Chosen Option : **2**



Q.72 Choose the correct option from the following options.

The internet games _____ children.

- Options
1. fascinating
 2. fascinates
 3. fascination
 4. fascinate

Question Type : **MCQ**

Question ID : **272171731**

Option 1 ID : **2721711064**

Option 2 ID : **2721711063**

Option 3 ID : **2721711061**

Option 4 ID : **2721711062**

Status : **Not Answered**

Chosen Option : --

Q.73 Fill in the blank with a suitable phrasal verb :

You need to _____ all dairy products from your diet.

- Options
1. mix up
 2. cut out
 3. cut down
 4. clam up

Question Type : **MCQ**

Question ID : **272171743**

Option 1 ID : **2721711111**

Option 2 ID : **2721711112**

Option 3 ID : **2721711109**

Option 4 ID : **2721711110**

Status : **Not Answered**

Chosen Option : --

Q.74 From the given options, choose the correct spelling of the word :

- Options
1. opulince
 2. opulens
 3. opulance
 4. opulence

Question Type : **MCQ**

Question ID : **272171742**

Option 1 ID : **2721711107**

Option 2 ID : **2721711106**

Option 3 ID : **2721711105**

Option 4 ID : **2721711108**

Status : **Not Answered**

Chosen Option : --



Q.75 Fill in the blanks with suitable articles from the options given below.

_____ apple _____ day keeps _____ doctor away.

- Options**
1. An, a, a
 2. The, a, a
 3. A, a, the
 4. An, a, the

Question Type : **MCQ**

Question ID : **272171737**

Option 1 ID : **2721711086**

Option 2 ID : **2721711085**

Option 3 ID : **2721711087**

Option 4 ID : **2721711088**

Status : **Marked For Review**

Chosen Option : **1**

Q.76 What is the type of communication in classroom when the students nod their heads appreciatively.

- Options**
1. Informal communication
 2. Diagonal communication
 3. Non-verbal communication
 4. Verbal communication

Question Type : **MCQ**

Question ID : **272171744**

Option 1 ID : **2721711115**

Option 2 ID : **2721711114**

Option 3 ID : **2721711116**

Option 4 ID : **2721711113**

Status : **Not Answered**

Chosen Option : **--**



Q.77 Match List I with List II

LIST I		LIST II (Antonyms)	
A.	Sympathy	I.	Violent
B.	Tranquil	II.	Modesty
C.	Vanity	III.	Protest
D.	Yield	IV.	Discord

Choose the correct answer from the options given below:

- Options
1. A-II, B-III, C-IV, D-I
 2. A-IV, B-I, C-II, D-III
 3. A-III, B-IV, C-I, D-II
 4. A-I, B-II, C-III, D-IV

Question Type : **MCQ**

Question ID : 272171738

Option 1 ID : 2721711092

Option 2 ID : 2721711091

Option 3 ID : 2721711090

Option 4 ID : 2721711089

Status : **Not Answered**

Chosen Option : --

Q.78 Which of the following options can be considered as verbal communication in a formal meeting?

- Options
1. Eye contact
 2. Oral presentation
 3. Movement in the conference room
 4. Handshake

Question Type : **MCQ**

Question ID : 272171732

Option 1 ID : 2721711066

Option 2 ID : 2721711067

Option 3 ID : 2721711068

Option 4 ID : 2721711065

Status : **Not Answered**

Chosen Option : --



Q.79 Choose from the given options the part of the statement that has an error.

Neeta & Veena wanted to distribute her books to needy children.

A B C

- Options 1. A
2. B
3. C
4. Both A & C

Question Type : **MCQ**
Question ID : **272171740**
Option 1 ID : **2721711097**
Option 2 ID : **2721711098**
Option 3 ID : **2721711099**
Option 4 ID : **2721711100**
Status : **Not Answered**
Chosen Option : --

Q.80 Re-order the parts of sentence to make a meaningful sentence. The first and last parts of the sentence are given below.

First part : Inspite of an unprecedented boom in the market

- A. and had to remain content
B. the paper - dealer could not
C. push up his sales
D. with a volume of sale lower than.

Last part: what he had sold the previous year.

Choose the correct answer from the options given below :

- Options 1. B, C, A, D
2. D, A, C, B
3. C, A, D, B
4. A, C, B, D

Question Type : **MCQ**
Question ID : **272171739**
Option 1 ID : **2721711093**
Option 2 ID : **2721711094**
Option 3 ID : **2721711096**
Option 4 ID : **2721711095**
Status : **Answered**
Chosen Option : **1**

Section : Knowledge Related To Intellectual Property Rights

Q.81 India recognises following as its Intellectual Property (IP) mascot.

Options

1. IP Master
2. IP Tau
3. IP Dadi
4. IP Nani

Question Type : **MCQ**

Question ID : **272171749**

Option 1 ID : **2721711136**

Option 2 ID : **2721711135**

Option 3 ID : **2721711133**

Option 4 ID : **2721711134**

Status : **Answered**

Chosen Option : **4**

Q.82 Paris Convention in 1883 was for -

Options

1. Protection of Literary and Artistic work
2. Protection of Industrial Property
3. Protection of olympic symbol
4. Protection of goods and services

Question Type : **MCQ**

Question ID : **272171754**

Option 1 ID : **2721711153**

Option 2 ID : **2721711154**

Option 3 ID : **2721711156**

Option 4 ID : **2721711155**

Status : **Answered**

Chosen Option : **2**

Q.83 Which of the following are rights of "owner of copyright"?

- A. Multiple Statutory Right
- B. Right to transfer
- C. Negative Right
- D. Moral Right (Special Right of Authors)

Choose the correct answer from the options given below :

Options

1. A and B only
2. A, B, C and D
3. B, C and D only
4. A, B and C only

Question Type : **MCQ**

Question ID : **272171756**

Option 1 ID : **2721711162**

Option 2 ID : **2721711161**

Option 3 ID : **2721711164**

Option 4 ID : **2721711163**

Status : **Not Answered**

Chosen Option : **--**



Q.84 Geographical Indications Registry (GI) is located at -

- Options
1. Delhi
 2. Chennai
 3. Nagpur
 4. Kolkatta

Question Type : **MCQ**
Question ID : **272171748**
Option 1 ID : **2721711131**
Option 2 ID : **2721711130**
Option 3 ID : **2721711132**
Option 4 ID : **2721711129**
Status : **Answered**
Chosen Option : **2**

Q.85 Which of the following are the forms of trade marks?

- A. Collective marks
- B. Service mark
- C. Certification Trade Marks
- D. Patent and Trade secrets

Choose the most appropriate answer from the options given below :

- Options
1. B, C and D only
 2. A and B only
 3. A, B and C only
 4. A, B, C and D

Question Type : **MCQ**
Question ID : **272171755**
Option 1 ID : **2721711159**
Option 2 ID : **2721711157**
Option 3 ID : **2721711158**
Option 4 ID : **2721711160**
Status : **Answered**
Chosen Option : **3**

Q.86 Select the name of first Director General of WIPO.

- Options
1. Kamil Idris (Sudan)
 2. Francis Gurray (Australia)
 3. Georg Bodenhausen (Netherlands)
 4. Arpad Bogsch (Hungary and USA)

Question Type : **MCQ**
Question ID : **272171765**
Option 1 ID : **2721711199**
Option 2 ID : **2721711200**
Option 3 ID : **2721711197**
Option 4 ID : **2721711198**
Status : **Not Answered**
Chosen Option : **--**

Q.87 As per the Copyright Act, 1957 following is not correct regarding term of copyright.

- Options**
1. General rule is that copyright lasts for 60 years
 2. Term start with publication during life of publisher only upto 10 years
 3. It is protected for a limited period of time only
 4. For anonymous and pseudonymous publication is for 60 years from the date of publication

Question Type : **MCQ**
Question ID : **272171761**
Option 1 ID : **2721711183**
Option 2 ID : **2721711181**
Option 3 ID : **2721711182**
Option 4 ID : **2721711184**
Status : **Answered**
Chosen Option : **2**

Q.88 Which of the following are not Trade Secrets?

- Options**
1. Designs
 2. Geographical Indications
 3. Market plans
 4. Plans

Question Type : **MCQ**
Question ID : **272171757**
Option 1 ID : **2721711165**
Option 2 ID : **2721711168**
Option 3 ID : **2721711167**
Option 4 ID : **2721711166**
Status : **Answered**
Chosen Option : **2**

Q.89 Which Section of Patent Act, 1970 empowers the Central Government to revoke patent in public interest ?

- Options**
1. Section 64
 2. Section 68
 3. Section 66
 4. Section 67

Question Type : **MCQ**
Question ID : **272171752**
Option 1 ID : **2721711145**
Option 2 ID : **2721711148**
Option 3 ID : **2721711146**
Option 4 ID : **2721711147**
Status : **Answered**
Chosen Option : **1**



Q.90 As per Global Innovation Index 2023 ranking, the GII Rank of India is -

- Options
1. 14
 2. 47
 3. 05
 4. 40

Question Type : **MCQ**

Question ID : **272171751**

Option 1 ID : **2721711142**

Option 2 ID : **2721711144**

Option 3 ID : **2721711141**

Option 4 ID : **2721711143**

Status : **Answered**

Chosen Option : **4**

Q.91 What is the time limit of Geographical Indication Tag?

- Options
1. 60 years
 2. 20 years
 3. 30 years
 4. 10 years

Question Type : **MCQ**

Question ID : **272171753**

Option 1 ID : **2721711152**

Option 2 ID : **2721711150**

Option 3 ID : **2721711151**

Option 4 ID : **2721711149**

Status : **Answered**

Chosen Option : **4**

Q.92 Which among the following is closely associated with intellectual property rights?

- Options
1. MFN
 2. TRIMS
 3. GATS
 4. TRIPS

Question Type : **MCQ**

Question ID : **272171762**

Option 1 ID : **2721711188**

Option 2 ID : **2721711186**

Option 3 ID : **2721711185**

Option 4 ID : **2721711187**

Status : **Answered**

Chosen Option : **4**



Q.93 The RGNIIPM has been established as a National Centre of Excellence for training, management research and education in the field of Intellectual Property (IP) Rights. It is located at -

- Options
1. Mumbai
 2. Delhi
 3. Ahmedabad
 4. Nagpur

Question Type : **MCQ**

Question ID : **272171750**

Option 1 ID : **2721711138**

Option 2 ID : **2721711137**

Option 3 ID : **2721711140**

Option 4 ID : **2721711139**

Status : **Answered**

Chosen Option : **4**

Q.94 As per the Copyright Act, 1957 the 'term' of protection of broadcasters rights (broadcast reproduction right) is _____ .

- Options
1. 15 years
 2. 25 years
 3. 10 years
 4. 30 years

Question Type : **MCQ**

Question ID : **272171758**

Option 1 ID : **2721711169**

Option 2 ID : **2721711170**

Option 3 ID : **2721711171**

Option 4 ID : **2721711172**

Status : **Not Answered**

Chosen Option : **--**



Q.95 Select the inventions that are not patentable in India.

- A. A method of Agriculture or horticulture.
- B. Inventions whose claims are contrary to well established natural laws.
- C. A presentation of information.
- D. Topography of integrated circuits.
- E. Inventions related to atomic energy and inventions prejudicial to the interest of security of India.

Choose the correct answer from the options give below :

- Options
- 1. A, C and E only
 - 2. B, C, D & E only
 - 3. A, B, C, D & E only
 - 4. A, C, D & E only

Question Type : **MCQ**
Question ID : **272171746**
Option 1 ID : **2721711122**
Option 2 ID : **2721711121**
Option 3 ID : **2721711123**
Option 4 ID : **2721711124**
Status : **Answered**
Chosen Option : **3**

Q.96 As on 1st January, 2023 the office of Trade Marks Registry is not located in this city.

- Options
- 1. Chennai
 - 2. Nagpur
 - 3. Ahmedabad
 - 4. Delhi

Question Type : **MCQ**
Question ID : **272171763**
Option 1 ID : **2721711190**
Option 2 ID : **2721711191**
Option 3 ID : **2721711192**
Option 4 ID : **2721711189**
Status : **Answered**
Chosen Option : **2**

Q.97 The head office of Trade Marks Registry of India is located at -

- Options
- 1. Delhi
 - 2. Kolkatta
 - 3. Chennai
 - 4. Mumbai

Question Type : **MCQ**
Question ID : **272171759**
Option 1 ID : **2721711173**
Option 2 ID : **2721711175**
Option 3 ID : **2721711176**
Option 4 ID : **2721711174**
Status : **Answered**
Chosen Option : **1**

Q.98 Copyright Registry is located at -

- Options
1. Chennai
 2. Bangluru
 3. Mumbai
 4. Delhi

Question Type : **MCQ**
Question ID : **272171760**
Option 1 ID : **2721711178**
Option 2 ID : **2721711180**
Option 3 ID : **2721711179**
Option 4 ID : **2721711177**
Status : **Answered**
Chosen Option : **3**

Q.99 Which of the following, is correct about The Patent Bill, 1953 and the Patents Bill, 1965?

- Options
1. Implementation is accepted by Parliament
 2. Implemented immediately
 3. Allowed extraterrestrial explorations feasible
 4. Lapsed due to political reasons

Question Type : **MCQ**
Question ID : **272171764**
Option 1 ID : **2721711194**
Option 2 ID : **2721711193**
Option 3 ID : **2721711196**
Option 4 ID : **2721711195**
Status : **Not Answered**
Chosen Option : **--**

Q.100 The Madrid system is a convenient and cost effective solution for registering and managing _____ worldwide.

- Options
1. GI
 2. Patents
 3. Copyright
 4. Trademarks

Question Type : **MCQ**
Question ID : **272171747**
Option 1 ID : **2721711128**
Option 2 ID : **2721711125**
Option 3 ID : **2721711127**
Option 4 ID : **2721711126**
Status : **Answered**
Chosen Option : **4**

