



Teachingninja.in



Latest Govt Job updates



Private Job updates



Free Mock tests available

Visit - teachingninja.in



Teachingninja.in

CGPDTM
Patent Examiner
Previous Year Paper
(Prelims)
21 Dec, 2023



DPIIT_Examiners of Patents and Designs Exam 21 Dec 23

Application No	
Candidate Name	
Roll No	
Test Date	21/12/2023
Test Time	9:00 AM - 11:00 AM
Subject	DPIIT Prelim

Section : General English

Q.1 Fill in the blank with the most appropriate word :
His irresponsible behaviour is _____ concerning.

1. widely
2. strongly
3. deeply
4. bitterly

Options 1. 1
2. 2
3. 3
4. 4

Question Type : MCQ
Question ID : 9333613
Option 1 ID : 9333619
Option 2 ID : 93336110
Option 3 ID : 93336111
Option 4 ID : 93336112
Status : Answered
Chosen Option : 3

Q.2 The given sentence is in active voice. Out of the four alternatives, choose the one that best expresses the same in passive voice :
You should not look down upon the poor.

1. The poor should not be looked down upon
2. The poor should be looked down upon
3. The poor should not look down
4. The poor should not be looked upon

Options 1. 1
2. 2
3. 3
4. 4

Question Type : MCQ
Question ID : 9333619
Option 1 ID : 93336133
Option 2 ID : 93336134
Option 3 ID : 93336135
Option 4 ID : 93336136
Status : Answered
Chosen Option : 1

Q.3 Fill in the blank with a suitable article from the following options given in the list :
Twelve inches make _____ foot.

1. a
2. the
3. an
4. upon

Options 1. 1

2. 2
3. 3
4. 4

Question Type : **MCQ**

Question ID : **93336111**

Option 1 ID : **93336141**

Option 2 ID : **93336142**

Option 3 ID : **93336143**

Option 4 ID : **93336144**

Status : **Answered**

Chosen Option : **1**

Q.4 Fill in the blank in the given sentence with the most appropriate option:
Rohit slipped on the _____ when he tried to lift the bag of flour.

1. floor
2. flour
3. flower
4. four

Options 1. 1

2. 2
3. 3
4. 4

Question Type : **MCQ**

Question ID : **9333612**

Option 1 ID : **9333615**

Option 2 ID : **9333616**

Option 3 ID : **9333617**

Option 4 ID : **9333618**

Status : **Answered**

Chosen Option : **1**

Q.5 Which of the following is opposite in meaning to the word "Obtain"?

1. Acquire
2. Inherit
3. Forfeit
4. Access

Options 1. 1

2. 2

3. 3

4. 4

Question Type : MCQ

Question ID : 93336115

Option 1 ID : 93336157

Option 2 ID : 93336158

Option 3 ID : 93336159

Option 4 ID : 93336160

Status : Answered

Chosen Option : 3

Q.6 The following sentence has an error. Choose the option that has the error :

Rita will be surprised as she hears the news.

1. Rita will
2. be surprised
3. as she
4. hears the news

Options 1. 1

2. 2

3. 3

4. 4

Question Type : MCQ

Question ID : 9333611

Option 1 ID : 9333611

Option 2 ID : 9333612

Option 3 ID : 9333613

Option 4 ID : 9333614

Status : Answered

Chosen Option : 3

Q.7 Select the most appropriate option from the list to fill in the blank in the given sentence :

Radha danced very well, _____ ?

1. did she?
2. didn't she?
3. isn't she?
4. Has she?

Options 1. 1

2. 2

3. 3

4. 4

Question Type : **MCQ**

Question ID : **93336110**

Option 1 ID : **93336137**

Option 2 ID : **93336138**

Option 3 ID : **93336139**

Option 4 ID : **93336140**

Status : **Answered**

Chosen Option : **2**

Q.8 Choose the correct meaning for the underlined idiom from the options given below:

Staying at home and doing regular household chores is not her cup of tea.

1. to one's liking
2. scattered things
3. under consideration
4. out of trouble

Options 1. 1

2. 2

3. 3

4. 4

Question Type : **MCQ**

Question ID : **9333618**

Option 1 ID : **93336129**

Option 2 ID : **93336130**

Option 3 ID : **93336131**

Option 4 ID : **93336132**

Status : **Answered**

Chosen Option : **1**

Q.9 Match the words in List I with their meaning in List II :

LIST I		LIST II	
A.	Ascertain	I.	connect something with something else.
B.	Associate	II.	make something more attractive.
C.	Embellish	III.	establish something after study.
D.	Incumbent	IV.	necessary as a duty or responsibility

Choose the correct answer from the options given below :

1. A-I, B-II, C-IV, D-III
2. A-III, B-I, C-II, D-IV
3. A-II, B-III, C-I, D-IV
4. A-IV, B-II, C-III, D-I

Options 1. 1

2. 2

3. 3

4. 4

Question Type : MCQ

Question ID : 9333616

Option 1 ID : 93336121

Option 2 ID : 93336122

Option 3 ID : 93336123

Option 4 ID : 93336124

Status : Not Answered

Chosen Option : --

Q.10 Which of the following elements is not a part of an informal letter :

1. Salutation
2. Sender's address
3. Subscription
4. Subject

Options 1. 1

2. 2

3. 3

4. 4

Question Type : MCQ

Question ID : 93336113

Option 1 ID : 93336149

Option 2 ID : 93336150

Option 3 ID : 93336151

Option 4 ID : 93336152

Status : Answered

Chosen Option : 4

Q.11 Choose the correct option from the following to fill in the blank :
Please make it a point to _____ the water tap before you go out.

1. turn down
2. turn about
3. turn off
4. turn out

Options 1. 1

2. 2
3. 3
4. 4

Question Type : **MCQ**

Question ID : **9333614**

Option 1 ID : **93336113**

Option 2 ID : **93336114**

Option 3 ID : **93336115**

Option 4 ID : **93336116**

Status : **Answered**

Chosen Option : **3**

Q.12 Choose the correct option to fill in the blank :
Our college hockey team _____ good players.

1. have
2. has
3. is
4. are

Options 1. 1

2. 2
3. 3
4. 4

Question Type : **MCQ**

Question ID : **93336112**

Option 1 ID : **93336145**

Option 2 ID : **93336146**

Option 3 ID : **93336147**

Option 4 ID : **93336148**

Status : **Answered**

Chosen Option : **2**



Q.13 Fill in the blank with the most appropriate word from the list given below :
Ever since the new leader has been elected, unemployment rates have started to _____.

1. vain
2. vein
3. feign
4. wane

Options 1. 1

2. 2
3. 3
4. 4

Question Type : **MCQ**

Question ID : **9333615**

Option 1 ID : **93336117**

Option 2 ID : **93336118**

Option 3 ID : **93336119**

Option 4 ID : **93336120**

Status : **Answered**

Chosen Option : **4**

Q.14 Choose the correct option to fill in the blank from the list given below :
Make hay _____ the sun shines.

1. while
2. if
3. where
4. because

Options 1. 1

2. 2
3. 3
4. 4

Question Type : **MCQ**

Question ID : **9333617**

Option 1 ID : **93336125**

Option 2 ID : **93336126**

Option 3 ID : **93336127**

Option 4 ID : **93336128**

Status : **Answered**

Chosen Option : **1**



Q.15 Which of the following is not a set of synonyms?

1. Pamper, Flatter, Indulge
2. Tame, Subdued, Wild
3. Yell, Scream, Shriek
4. Ravage, Destroy, Ruin

Options 1. 1

2. 2

3. 3

4. 4

Question Type : MCQ

Question ID : 93336114

Option 1 ID : 93336153

Option 2 ID : 93336154

Option 3 ID : 93336155

Option 4 ID : 93336156

Status : Answered

Chosen Option : 2

Section : Verbal and non verbal

Q.16 Find out the wrong number in the given sequence of numbers:
56, 72, 90, 110, 132, 152

1. 72
2. 110
3. 132
4. 152

Options 1. 1

2. 2

3. 3

4. 4

Question Type : MCQ

Question ID : 93336129

Option 1 ID : 933361113

Option 2 ID : 933361114

Option 3 ID : 933361115

Option 4 ID : 933361116

Status : Not Answered

Chosen Option : --



Q.17 Which conclusion would follow on the basis of given statements:

Statements :

No White is Carrot.

No Carrot is Mango.

Some Apple are Mango.

Conclusion :

I. No Mango is White.

II. No Mango is Carrot.

III. Some Carrot are White.

IV. All Mangoes are White.

1. Only I conclusion follow.

2. Only II conclusion follow.

3. All conclusions follow.

4. Both I and III conclusions follow.

Options 1. 1

2. 2

3. 3

4. 4

Question Type : MCQ

Question ID : 93336119

Option 1 ID : 93336173

Option 2 ID : 93336174

Option 3 ID : 93336175

Option 4 ID : 93336176

Status : Answered

Chosen Option : 2

Q.18 In a locality, there are 5 houses in a row. These houses are red, brown, green, purple and black in colour. The greenhouse is at the centre. The red and green houses are both adjacent to the brown house. The purple house is second to the right of the brown house. Which house is to the immediate right of the purple house?

1. Brown

2. Red

3. Green

4. Black

Options 1. 1

2. 2

3. 3

4. 4

Question Type : MCQ

Question ID : 93336138

Option 1 ID : 933361149

Option 2 ID : 933361150

Option 3 ID : 933361151

Option 4 ID : 933361152

Status : Answered

Chosen Option : 4



Q.19 At the time of sunrise, Deepak and Ankita are sitting in a park with their backs facing each other. If the shadow of Deepak falls to the right of Ankita, then in which direction is Ankita facing?

1. East
2. West
3. North
4. South

Options 1. 1

2. 2
3. 3
4. 4

Question Type : MCQ

Question ID : 93336127

Option 1 ID : 933361105

Option 2 ID : 933361106

Option 3 ID : 933361107

Option 4 ID : 933361108

Status : Answered

Chosen Option : 4

Q.20 Statement : "If you trouble me, I will slap you." - A mother warns her child.

Assumptions :

- I. With the warning, the child may stop troubling her.
- II. All children are basically naughty.

1. If only assumption I is implicit
2. If only assumption II is implicit
3. If either I or II is implicit
4. If neither I nor II is implicit

Options 1. 1

2. 2
3. 3
4. 4

Question Type : MCQ

Question ID : 93336116

Option 1 ID : 93336161

Option 2 ID : 93336162

Option 3 ID : 93336163

Option 4 ID : 93336164

Status : Answered

Chosen Option : 4



Q.21 If Nikita Says, "Parul's father Om is the only son of my father-in-law Chiranjeev", then how is Ritu, who is the sister of Parul, related to Chiranjeev?

1. Daughter
2. Son
3. Niece
4. Grand-daughter

Options 1. 1

2. 2
3. 3
4. 4

Question Type : **MCQ**

Question ID : **93336142**

Option 1 ID : **933361165**

Option 2 ID : **933361166**

Option 3 ID : **933361167**

Option 4 ID : **933361168**

Status : **Answered**

Chosen Option : **4**

Q.22 Find the next number of series:
10, 11, 13, 19, 43, ?

1. 150
2. 160
3. 163
4. 180

Options 1. 1

2. 2
3. 3
4. 4

Question Type : **MCQ**

Question ID : **93336140**

Option 1 ID : **933361157**

Option 2 ID : **933361158**

Option 3 ID : **933361159**

Option 4 ID : **933361160**

Status : **Not Answered**

Chosen Option : **--**



Q.23 In a certain code, 24 means "start whispering" and 68 means "its irritating". What do 8 and 6 mean respectively in that code?

- I. 267 means "start irritating me".
II. 4582 means "it's start like whispering".

1. If data either in the statement I alone or statement II alone are sufficient to answer the question.
2. If data in the statement I alone is sufficient to answer the question. but statement II alone is not sufficient
3. If data in the statement II alone is sufficient to answer the question. but statement I alone is not sufficient
4. If data in both statements I and II together are necessary to answer the question.

Options 1. 1

2. 2

3. 3

4. 4

Question Type : **MCQ**

Question ID : **93336134**

Option 1 ID : **933361133**

Option 2 ID : **933361134**

Option 3 ID : **933361135**

Option 4 ID : **933361136**

Status : **Answered**

Chosen Option : 1

Q.24 Read the following information carefully and answer the questions given beside:
8 persons from A to H are sitting around a square table such that 4 persons sit at each of the corners while the rest 4 sits at the middle of the sides. The ones sitting at the corners are facing inside while the rest are facing outside. The persons whose name starts with consecutive letters do not sit adjacent. B sits second to the right of A, who is on the immediate left of C. F sits on the immediate right of D, who sits at one of the corners. At least one person sits between C and G. E sits between A and B.

How many persons sit between C and D when counted from the left of C?

1. 3

2. 4

3. 5

4. 6

Options 1. 1

2. 2

3. 3

4. 4

Question Type : **MCQ**

Question ID : **93336121**

Option 1 ID : **93336181**

Option 2 ID : **93336182**

Option 3 ID : **93336183**

Option 4 ID : **93336184**

Status : **Answered**

Chosen Option : 2



Q.25 Read the following information carefully and answer the questions given beside:
8 persons from A to H are sitting around a square table such that 4 persons sit at each of the corners while the rest 4 sits at the middle of the sides. The ones sitting at the corners are facing inside while the rest are facing outside. The persons whose name starts with consecutive letters do not sit adjacent. B sits second to the right of A, who is on the immediate left of C. F sits on the immediate right of D, who sits at one of the corners. At least one person sits between C and G. E sits between A and B .

Who sits on the immediate left of C?

1. E
2. A
3. H
4. F

Options 1. 1

2. 2

3. 3

4. 4

Question Type : **MCQ**

Question ID : **93336123**

Option 1 ID : **93336189**

Option 2 ID : **93336190**

Option 3 ID : **93336191**

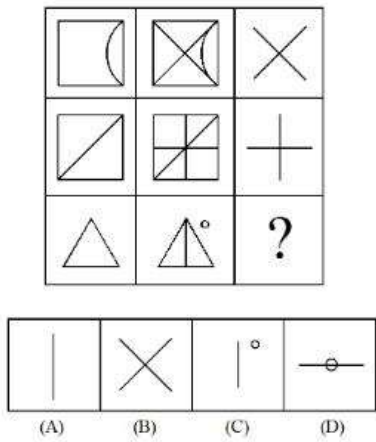
Option 4 ID : **93336192**

Status : **Answered**

Chosen Option : **2**



Q.26 Select a suitable figure from the four alternatives that would complete the figure matrix.



- 1. A
- 2. B
- 3. C
- 4. D

Options 1. 1
2. 2
3. 3
4. 4

Question Type : MCQ
Question ID : 93336133
Option 1 ID : 933361129
Option 2 ID : 933361130
Option 3 ID : 933361131
Option 4 ID : 933361132
Status : Answered
Chosen Option : 3

Q.27 In the following analogy, find out the alternative which will replace the question mark.

$137 : 17^3 :: 123 : ?$

- 1. 16^2
- 2. 15^2
- 3. 13^2
- 4. 17^2

Options 1. 1
2. 2
3. 3
4. 4

Question Type : MCQ
Question ID : 93336117
Option 1 ID : 93336165
Option 2 ID : 93336166
Option 3 ID : 93336167
Option 4 ID : 93336168
Status : Not Answered
Chosen Option : --

Q.28 Study the following information carefully and answer the question.

J is sister of A. A is married to D. D is father of R. M is son of H. A is mother-in-law of H. D has only one son and no daughter. J is married to B. L is daughter of B. How is L related to A?

1. Aunt
2. Daughter
3. Mother
4. Niece

Options 1. 1

2. 2
3. 3
4. 4

Question Type : MCQ

Question ID : 93336126

Option 1 ID : 933361101

Option 2 ID : 933361102

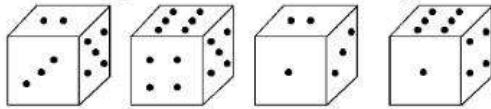
Option 3 ID : 933361103

Option 4 ID : 933361104

Status : Answered

Chosen Option : 4

Q.29 How many points will be on the face opposite to the face which contains 2 points?



1. 3
2. 4
3. 6
4. 5

Options 1. 1

2. 2
3. 3
4. 4

Question Type : MCQ

Question ID : 93336131

Option 1 ID : 933361121

Option 2 ID : 933361122

Option 3 ID : 933361123

Option 4 ID : 933361124

Status : Answered

Chosen Option : 3

Q.30 **Statements :**

0% fruits are black.

All pen are fruits.

A few banana are black.

Conclusions :

I. No black is pen.

II. Some banana are not fruits.

1. If only conclusion I follows
2. If only conclusion II follows
3. If both conclusions I and II follows
4. If either conclusions I or II follows

Options 1. 1

2. 2

3. 3

4. 4

Question Type : **MCQ**

Question ID : **93336141**

Option 1 ID : **933361161**

Option 2 ID : **933361162**

Option 3 ID : **933361163**

Option 4 ID : **933361164**

Status : **Answered**

Chosen Option : **1**

Q.31 On which floor is Sneha residing?

I. In a six storey building (Ground floor is parking space), Ritu is on fourth floor. Sneha likes to reside only on even numbered floors. Riya is not on the topmost floor.

II. Riya is two floor below Praveen who is 3 floors above Sneha.

1. If data in the statement I alone is sufficient to answer the question.
2. If data in the statement II alone is sufficient to answer the question.
3. If data given in both I and II together are not sufficient to answer the question.
4. If data given in both I and II together are necessary to answer the question.

Options 1. 1

2. 2

3. 3

4. 4

Question Type : **MCQ**

Question ID : **93336130**

Option 1 ID : **933361117**

Option 2 ID : **933361118**

Option 3 ID : **933361119**

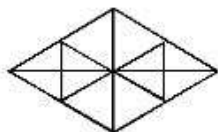
Option 4 ID : **933361120**

Status : **Not Attempted and
Marked For Review**

Chosen Option : **--**



Q.32 Find number of triangles in the given figure:



- 1. 28
- 2. 29
- 3. 30
- 4. 24

Options 1. 1
2. 2
3. 3
4. 4

Question Type : MCQ

Question ID : 93336132

Option 1 ID : 933361125

Option 2 ID : 933361126

Option 3 ID : 933361127

Option 4 ID : 933361128

Status : Answered

Chosen Option : 1

Q.33 A clock is set right at 4 a.m. The clock loses 16 minutes in 24 hours. What will be the true time when the clock indicates 9 p.m. on 4th day?

- 1. 9:30 pm
- 2. 10 pm
- 3. 10:30 pm
- 4. 11 pm

Options 1. 1
2. 2
3. 3
4. 4

Question Type : MCQ

Question ID : 93336124

Option 1 ID : 93336193

Option 2 ID : 93336194

Option 3 ID : 93336195

Option 4 ID : 93336196

Status : Answered

Chosen Option : 2

Q.34 How many times in a day, the Hour hand and minute hand of a clock form 180° angle with each other?

- 1. 20
- 2. 22
- 3. 24
- 4. 23

Options 1. 1

- 2. 2
- 3. 3
- 4. 4

Question Type : **MCQ**

Question ID : **93336145**

Option 1 ID : **933361177**

Option 2 ID : **933361178**

Option 3 ID : **933361179**

Option 4 ID : **933361180**

Status : **Answered**

Chosen Option : **3**

Q.35 Find the missing term of series:
2K9, 2E3, 1J9, 1H7, ?

- 1. 1D3
- 2. 2E3
- 3. 5F1
- 4. 6I3

Options 1. 1

- 2. 2
- 3. 3
- 4. 4

Question Type : **MCQ**

Question ID : **93336128**

Option 1 ID : **933361109**

Option 2 ID : **933361110**

Option 3 ID : **933361111**

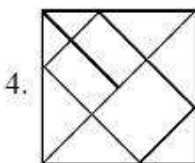
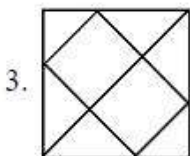
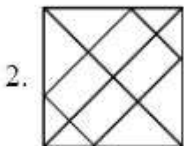
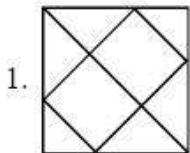

Option 4 ID : **933361112**

Status : **Answered**

Chosen Option : **4**



Q.36 Which option will complete the pattern in the figure?



- Options 1. 1
2. 2
3. 3
4. 4

Question Type : MCQ

Question ID : 93336144

Option 1 ID : 933361173

Option 2 ID : 933361174

Option 3 ID : 933361175

Option 4 ID : 933361176

Status : Answered

Chosen Option : 1



Q.37 In a certain code language “PHYSICAL” is written as MBDJTZIQ. How is “SPECIAL” written in that code language

1. MBJDFQU
2. MBJDFQT
3. MBDJQFT
4. MBCJQFT

Options 1. 1

2. 2
3. 3
4. 4

Question Type : **MCQ**

Question ID : **93336135**

Option 1 ID : **933361137**

Option 2 ID : **933361138**

Option 3 ID : **933361139**

Option 4 ID : **933361140**

Status : **Not Attempted and
Marked For Review**

Chosen Option : --

Q.38 During a prize distribution ceremony, Vicky was ninth from the left while Juhi was eighth from the right in the front row. If Harish was thirteenth from the left and was exactly in the middle of Vicky and Juhi in the same row then what was the total number of people in the front row?

1. 18
2. 20
3. 22
4. 24

Options 1. 1

2. 2
3. 3
4. 4

Question Type : **MCQ**

Question ID : **93336120**

Option 1 ID : **93336177**

Option 2 ID : **93336178**

Option 3 ID : **93336179**

Option 4 ID : **93336180**

Status : **Answered**

Chosen Option : **4**



Q.39 Find the next number of series :

$$\frac{20}{3}, 10, 15, 22.5, ?$$

1. 25
2. 33.75
3. 60
4. 40.5

Options 1. 1

2. 2
3. 3
4. 4

Question Type : MCQ

Question ID : 93336139

Option 1 ID : 933361153

Option 2 ID : 933361154

Option 3 ID : 933361155

Option 4 ID : 933361156

Status : Answered

Chosen Option : 2

Q.40 Study the conclusions based on the given statement and select answer:

Statements : $8 > 5 > 9 = 1 < 3$, $4 \leq 2 = 6 < 9 < 0$

Conclusions :

I. $5 > 2$

II. $4 \leq 1$

1. Only conclusion I follows
2. Only conclusion II follows
3. Both conclusions I and II follow
4. Either I or II conclusion follow

Options 1. 1

2. 2
3. 3
4. 4

Question Type : MCQ

Question ID : 93336143

Option 1 ID : 933361169

Option 2 ID : 933361170

Option 3 ID : 933361171

Option 4 ID : 933361172

Status : Answered

Chosen Option : 1



Q.41 If August 15th, 2016 falls on Thursday then June 11th, 2017 falls on which day?

1. Tuesday
2. Wednesday
3. Thursday
4. Friday

Options 1. 1

2. 2
3. 3
4. 4

Question Type : **MCQ**

Question ID : **93336125**

Option 1 ID : **93336197**

Option 2 ID : **93336198**

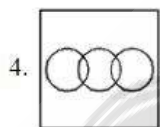

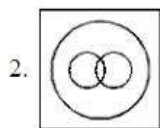
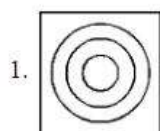
Option 3 ID : **93336199**

Option 4 ID : **933361100**

Status : **Not Attempted and
Marked For Review**

Chosen Option : --

Q.42 Identify the diagram that best represents the relationship among the given classes:
Brother, Men, Husband



Options 1. 1

2. 2
3. 3
4. 4

Question Type : **MCQ**

Question ID : **93336118**

Option 1 ID : **93336169**

Option 2 ID : **93336170**

Option 3 ID : **93336171**

Option 4 ID : **93336172**

Status : **Answered**

Chosen Option : **3**



Q.43 The position of how many digits in the number 2451478639 will remain same when the first half and the second half of the digits are arranged in ascending order separately?

1. None
2. One
3. Two
4. Three

Options 1. 1

2. 2
3. 3
4. 4

Question Type : **MCQ**

Question ID : 93336136

Option 1 ID : 933361141

Option 2 ID : 933361142

Option 3 ID : 933361143

Option 4 ID : 933361144

Status : **Answered**

Chosen Option : **2**

Q.44 Five people P, Q, R, S and T are seated around a round table and all are facing the Centre of table. Every chair is spaced equidistant from adjacent chairs.

- i. R is seated next to P.
- ii. P is seated second left from S.
- iii. Q is not seated next to P.

Which of the following Statement must be true?

Statement A: S is seated next to Q.
Statement B: T is seated next to P.

1. A only
2. B only
3. Both A and B
4. Neither A nor B

Options 1. 1

2. 2
3. 3
4. 4

Question Type : **MCQ**

Question ID : 93336137

Option 1 ID : 933361145

Option 2 ID : 933361146

Option 3 ID : 933361147

Option 4 ID : 933361148

Status : **Answered**

Chosen Option : **3**

Q.45 Read the following information carefully and answer the questions given beside:
8 persons from A to H are sitting around a square table such that 4 persons sit at each of the corners while the rest 4 sits at the middle of the sides. The ones sitting at the corners are facing inside while the rest are facing outside. The persons whose name starts with consecutive letters do not sit adjacent. B sits second to the right of A, who is on the immediate left of C. F sits on the immediate right of D, who sits at one of the corners. At least one person sits between C and G. E sits between A and B.

Who sits on the immediate right of G?

1. A
2. B
3. C
4. D

Options 1. 1

2. 2
3. 3
4. 4

Question Type : **MCQ**

Question ID : **93336122**

Option 1 ID : **93336185**

Option 2 ID : **93336186**

Option 3 ID : **93336187**

Option 4 ID : **93336188**

Status : **Answered**

Chosen Option : **2**

Section : **Quantitative aptitude**

Q.46 A tap can fill a tank in 6 hours. After half the tank is filled, three more similar taps are opened. What is the total time taken by pipes to fill the tank completely?

1. 3 hrs 15 mins
2. 3 hrs 45 mins
3. 4 hrs
4. 4 hrs 15 mins

Options 1. 1

2. 2
3. 3
4. 4

Question Type : **MCQ**

Question ID : **93336146**

Option 1 ID : **933361181**

Option 2 ID : **933361182**

Option 3 ID : **933361183**

Option 4 ID : **933361184**

Status : **Answered**

Chosen Option : **2**



Q.47 If $5\sqrt{\frac{6}{5}} - 6\sqrt{\frac{5}{6}} + \sqrt{5} + \sqrt{45} = 2\sqrt{\frac{1}{5}} N$, then N is equal to :

1. $2\sqrt{5}$
2. -2
3. 10
4. $\frac{3}{\sqrt{5}}$

Options 1. 1
2. 2
3. 3
4. 4

Question Type : MCQ

Question ID : 93336166

Option 1 ID : 933361261

Option 2 ID : 933361262

Option 3 ID : 933361263

Option 4 ID : 933361264

Status : Not Answered

Chosen Option : --

Q.48 Ten litre milk with 90% purity is mixed with 15 litre milk with 80% purity. Find the percentage of milk in this mixture.

1. 82%
2. 84%
3. 85%
4. 83%

Options 1. 1
2. 2
3. 3
4. 4

Question Type : MCQ

Question ID : 93336163

Option 1 ID : 933361249

Option 2 ID : 933361250

Option 3 ID : 933361251

Option 4 ID : 933361252

Status : Answered

Chosen Option : 2



Q.49 The average of k , $(k + 10)$, 6, 8 and 9 is 9 and the average of p , $(4p + 1)$, 7 and 5 is 7. Find the value of $(k - p)$.

- 1. 2
- 2. 3
- 3. 3.5
- 4. 3.8

Options 1. 1

- 2. 2
- 3. 3
- 4. 4

Question Type : **MCQ**

Question ID : **93336173**

Option 1 ID : **933361289**

Option 2 ID : **933361290**

Option 3 ID : **933361291**

Option 4 ID : **933361292**

Status : **Not Attempted and
Marked For Review**

Chosen Option : --

Q.50 A and B started a business by investing Rs 48,000 and Rs 60,000 respectively. At the end of the year, B received Rs 10,000 more than A as his share in the profit. Find the total profit.

- 1. Rs 98,600
- 2. Rs 95,500
- 3. Rs 94,000
- 4. Rs 90,000

Options 1. 1

- 2. 2
- 3. 3
- 4. 4

Question Type : **MCQ**

Question ID : **93336164**

Option 1 ID : **933361253**

Option 2 ID : **933361254**

Option 3 ID : **933361255**

Option 4 ID : **933361256**

Status : **Answered**

Chosen Option : **4**



Q.51 Find a single discount equivalent to successive discounts of 10%, 20% and 25%.

1. 55%
2. 54%
3. 46%
4. 52%

Options 1. 1

2. 2
3. 3
4. 4

Question Type : **MCQ**

Question ID : **93336150**

Option 1 ID : **933361197**

Option 2 ID : **933361198**

Option 3 ID : **933361199**

Option 4 ID : **933361200**

Status : **Answered**

Chosen Option : **3**

Q.52 A group of 20 people has the oldest person with 90 years of age. The average age of the group is reduced by 4 years if the oldest person is replaced by someone new. Find the age of the new person.

1. 10 years
2. 15 years
3. 20 years
4. 25 years

Options 1. 1

2. 2
3. 3
4. 4

Question Type : **MCQ**

Question ID : **93336158**

Option 1 ID : **933361229**

Option 2 ID : **933361230**

Option 3 ID : **933361231**

Option 4 ID : **933361232**

Status : **Not Attempted and
Marked For Review**

Chosen Option : **--**



Q.53 A and B together can do a work in 12 days. If A worked half as efficiently as he usually does and B worked thrice as efficiently as he usually does, the work got completed in 9 days. How long would take to do the work if he works independently with his usual efficiency?

1. 15 days
2. 16 days
3. 17 days
4. 18 days

Options 1. 1

2. 2
3. 3
4. 4

Question Type : MCQ

Question ID : 93336147

Option 1 ID : 933361185

Option 2 ID : 933361186

Option 3 ID : 933361187

Option 4 ID : 933361188

Status : Answered

Chosen Option : 4

Q.54 In a river, water is flowing with a speed of 2 km/h. A motor boat takes 33 minutes in going 6 km upstream and coming back to the same point. The speed of the boat in still water (in km/h) is :

1. 20
2. 22
3. 28
4. 30

Options 1. 1

2. 2
3. 3
4. 4

Question Type : MCQ

Question ID : 93336174

Option 1 ID : 933361293

Option 2 ID : 933361294

Option 3 ID : 933361295

Option 4 ID : 933361296

Status : Answered

Chosen Option : 2

Q.55 Simplify $\frac{32 \div 4 + 2 \times 2 - 1}{6 + 24 \div 3 \times 2 \div 2}$

1. $\frac{3}{8}$

2. $\frac{11}{14}$

3. $\frac{3}{10}$

4. $\frac{2}{3}$

Options 1. 1

2. 2

3. 3

4. 4

Question Type : MCQ

Question ID : 93336172

Option 1 ID : 933361285

Option 2 ID : 933361286

Option 3 ID : 933361287

Option 4 ID : 933361288

Status : Answered

Chosen Option : 2

Q.56 What will be the amount after 3 years if a sum of Rs 10,000 is invested on compound interest when the rate of interest for the first, the second and the third years are 10%, 5% and 2% per annum respectively?

1. Rs 11781

2. Rs 11244

3. Rs 11231

4. Rs 11658

Options 1. 1

2. 2

3. 3

4. 4

Question Type : MCQ

Question ID : 93336153

Option 1 ID : 933361209

Option 2 ID : 933361210

Option 3 ID : 933361211

Option 4 ID : 933361212

Status : Answered

Chosen Option : 1



Q.57

If $a = 15$ and $b = 13$, then find the value of $\frac{4(a^2 + b^2 + ab)}{a^3 - b^3}$.

1. $\frac{1}{2}$

2. 2

3. 3

4. $\frac{1}{16}$

Options 1. 1

2. 2

3. 3

4. 4

Question Type : MCQ

Question ID : 93336160

Option 1 ID : 933361237

Option 2 ID : 933361238

Option 3 ID : 933361239

Option 4 ID : 933361240

Status : Answered

Chosen Option : 2

Q.58 The mean of 2, 7, 6 and x is 5. If the mode of 8, 7, 6, 5 and $(y + 1)$ is 8, then find the value of $x^2 + y^2$.

1. 89

2. 82

3. 74

4. 72

Options 1. 1

2. 2

3. 3

4. 4

Question Type : MCQ

Question ID : 93336165

Option 1 ID : 933361257

Option 2 ID : 933361258

Option 3 ID : 933361259

Option 4 ID : 933361260

Status : Answered

Chosen Option : 3



Q.59 A 5-digit number 45K12 is divisible by 8. Find the sum of all possible values of K.

- 1. 22
- 2. 25
- 3. 26
- 4. 28

Options 1. 1

- 2. 2
- 3. 3
- 4. 4

Question Type : **MCQ**

Question ID : **93336171**

Option 1 ID : **933361281**

Option 2 ID : **933361282**

Option 3 ID : **933361283**

Option 4 ID : **933361284**

Status : **Not Attempted and
Marked For Review**

Chosen Option : --

Q.60 A certain sum becomes 160% of itself after 5 years on simple interest. The rate of interest per annum is:

- 1. 16%
- 2. 15%
- 3. 12.5%
- 4. 12%

Options 1. 1

- 2. 2
- 3. 3
- 4. 4

Question Type : **MCQ**

Question ID : **93336154**

Option 1 ID : **933361213**

Option 2 ID : **933361214**

Option 3 ID : **933361215**

Option 4 ID : **933361216**

Status : **Answered**

Chosen Option : **4**



Q.61 The greatest possible length which can be used to measure the lengths 7 m, 3 m 85 cm and 12 m 95 cm exactly is :

- 1. 30 cm
- 2. 32 cm
- 3. 35 cm
- 4. 40 cm

Options 1. 1

- 2. 2
- 3. 3
- 4. 4

Question Type : **MCQ**

Question ID : **93336167**

Option 1 ID : **933361265**

Option 2 ID : **933361266**

Option 3 ID : **933361267**

Option 4 ID : **933361268**

Status : **Not Answered**

Chosen Option : --

Q.62 An item is sold for Rs 144. If profit percentage is numerically equal to the cost price, then cost price of the item is :

- 1. Rs 72
- 2. Rs 80
- 3. Rs 90
- 4. Rs 70

Options 1. 1

- 2. 2
- 3. 3
- 4. 4

Question Type : **MCQ**

Question ID : **93336175**

Option 1 ID : **933361297**

Option 2 ID : **933361298**

Option 3 ID : **933361299**

Option 4 ID : **933361300**

Status : **Answered**

Chosen Option : **1**



Q.63 Ram got married 8 years ago. His present age is $\frac{6}{5}$ times his age at the time of his marriage. Ram's sister is 10 years younger to him. The present age of Ram's sister is :

1. 32 years
2. 36 years
3. 38 years
4. 40 years

Options 1. 1

2. 2
3. 3
4. 4

Question Type : **MCQ**

Question ID : **93336159**

Option 1 ID : **933361233**

Option 2 ID : **933361234**

Option 3 ID : **933361235**

Option 4 ID : **933361236**

Status : **Answered**

Chosen Option : **3**

Q.64 Aman purchases some apples at the rate of 41 for Rs 100. How many apples for Rs 100 should he sell to gain 64% profit?

1. 20 apples
2. 25 apples
3. 30 apples
4. 35 apples

Options 1. 1

2. 2
3. 3
4. 4

Question Type : **MCQ**

Question ID : **93336151**

Option 1 ID : **933361201**

Option 2 ID : **933361202**

Option 3 ID : **933361203**

Option 4 ID : **933361204**

Status : **Not Answered**

Chosen Option : **--**



Q.65 A cylinder of height 22 cm has base radius 6 cm. What is the total surface area of the cylinder (in cm^2)? (Use $\pi = \frac{22}{7}$)

- 1. 829.71
- 2. 942.86
- 3. 1056
- 4. 528

Options 1. 1

- 2. 2
- 3. 3
- 4. 4

Question Type : MCQ

Question ID : 93336157

Option 1 ID : 933361225

Option 2 ID : 933361226

Option 3 ID : 933361227

Option 4 ID : 933361228

Status : Answered

Chosen Option : 2

Q.66 Laxman can cover a certain distance in 1 hr 24 min by covering two-third of the distance at 4 km/h and the rest at 5 km/h. Find the total distance.

- 1. 11 km
- 2. 6 km
- 3. 5 km
- 4. 9 km

Options 1. 1

- 2. 2
- 3. 3
- 4. 4

Question Type : MCQ

Question ID : 93336148

Option 1 ID : 933361189

Option 2 ID : 933361190

Option 3 ID : 933361191

Option 4 ID : 933361192

Status : Answered

Chosen Option : 2



Q.67 Two dice are thrown simulataneously. What is the probability of getting a total of atleast 10?

1. $\frac{1}{6}$
2. $\frac{1}{12}$
3. $\frac{5}{6}$
4. $\frac{11}{12}$

Options 1. 1

2. 2
3. 3
4. 4

Question Type : MCQ

Question ID : 93336169

Option 1 ID : 933361273

Option 2 ID : 933361274

Option 3 ID : 933361275

Option 4 ID : 933361276

Status : Answered

Chosen Option : 3

Q.68 If $5 \tan \theta = 12$, then find the value of $\cos \theta - \sin \theta$.

1. -1
2. $\frac{5}{13}$
3. $-\frac{7}{13}$
4. $\frac{27}{20}$

Options 1. 1

2. 2
3. 3
4. 4

Question Type : MCQ

Question ID : 93336149

Option 1 ID : 933361193

Option 2 ID : 933361194

Option 3 ID : 933361195

Option 4 ID : 933361196

Status : Answered

Chosen Option : 3



Q.69 If A (1, -4), B (3, 2) and C (-1, 2) are the vertices of a triangle ABC, then what is the length of the median through C?

- 1. 2 units
- 2. $\sqrt{2}$ units
- 3. $3\sqrt{2}$ units
- 4. $\sqrt{10}$ units

Options 1. 1

- 2. 2
- 3. 3
- 4. 4

Question Type : MCQ

Question ID : 93336170

Option 1 ID : 933361277

Option 2 ID : 933361278

Option 3 ID : 933361279

Option 4 ID : 933361280

Status : Not Answered

Chosen Option : --

Q.70 Find the fourth proportional of 3, 16 and 15.

- 1. 28
- 2. 42
- 3. 65
- 4. 80

Options 1. 1

- 2. 2
- 3. 3
- 4. 4

Question Type : MCQ

Question ID : 93336161

Option 1 ID : 933361241

Option 2 ID : 933361242

Option 3 ID : 933361243

Option 4 ID : 933361244

Status : Answered

Chosen Option : 4



Q.71 The incomes of A and B are in the ratio 2 : 3 and their expenditures are in the ratio 4 : 5. If their savings are Rs 9,000 and Rs 17,500 respectively, then find the income of A.

1. Rs 12,500
2. Rs 25,000
3. Rs 37,500
4. Rs 50,000

Options 1. 1
2. 2
3. 3
4. 4

Question Type : MCQ

Question ID : 93336162

Option 1 ID : 933361245

Option 2 ID : 933361246

Option 3 ID : 933361247

Option 4 ID : 933361248

Status : Answered

Chosen Option : 3

Q.72 In an election between two candidates, 20% voters did not cast their vote and 1000 votes were declared invalid. If the winner gets 75% of the valid votes and he wins by 1500 votes, then find the number of voters in the voting list?

1. 3000
2. 4000
3. 5000
4. 6000

Options 1. 1
2. 2
3. 3
4. 4

Question Type : MCQ

Question ID : 93336152

Option 1 ID : 933361205

Option 2 ID : 933361206

Option 3 ID : 933361207

Option 4 ID : 933361208

Status : Not Answered

Chosen Option : --

Q.73 A large cube is formed by melting three cubes of side 3 cm, 4 cm and 5 cm respectively. What is the ratio of the volume of the large cube to the smallest of the three cubes?

1. 8 : 1
2. 6 : 1
3. 10 : 1
4. 13 : 1

Options 1. 1

2. 2
3. 3
4. 4

Question Type : MCQ

Question ID : 93336156

Option 1 ID : 933361221

Option 2 ID : 933361222

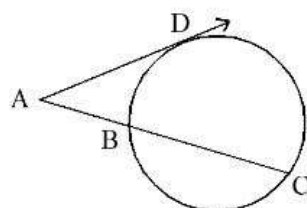
Option 3 ID : 933361223

Option 4 ID : 933361224

Status : Answered

Chosen Option : 1

Q.74 In the given figure, tangent AD = 10 cm. If AB = 5 cm, then length of BC will be :



1. 20 cm
2. 8 cm
3. 10 cm
4. 15 cm

Options 1. 1

2. 2
3. 3
4. 4

Question Type : MCQ

Question ID : 93336168

Option 1 ID : 933361269

Option 2 ID : 933361270

Option 3 ID : 933361271

Option 4 ID : 933361272

Status : Not Answered

Chosen Option : --

Q.75 The perimeter of a rhombus is 100 cm and length of one of its diagonals is 48 cm.
The area of the rhombus (in cm^2) is :

1. 84
2. 168
3. 336
4. 672

Options 1. 1

2. 2
3. 3
4. 4

Question Type : **MCQ**

Question ID : **93336155**

Option 1 ID : **933361217**

Option 2 ID : **933361218**

Option 3 ID : **933361219**

Option 4 ID : **933361220**

Status : **Not Answered**

Chosen Option : --

Section : General Knowledge

Q.76 Which State / UT of India's declared as "First Swachh Sujal Pradesh"?

1. Andaman and Nicobar Islands
2. Madhya Pradesh
3. Gujarat
4. Andhra Pradesh

Options 1. 1

2. 2
3. 3
4. 4

Question Type : **MCQ**

Question ID : **933361103**

Option 1 ID : **933361409**

Option 2 ID : **933361410**

Option 3 ID : **933361411**

Option 4 ID : **933361412**

Status : **Answered**

Chosen Option : **3**



Q.77 Match List I with List II

LIST I		LIST II (Nick Names)	
A.	Samudra Gupta	I.	Man of Peace
B.	Sarojini Naidu	II.	Morning star of India Renaissance
C.	Raja Ram Mohan Roy	III.	Nightingale of India
D.	Lal Bahadur Shastri	IV.	Napolean of India

Choose the correct answer from the options given below:

1. A-IV, B-III, C-I, D-II
2. A-II, B-III, C-IV, D-I
3. A-IV, B-I, C-II, D-III
4. A-IV, B-III, C-II, D-I

Options 1. 1

2. 2

3. 3

4. 4

Question Type : MCQ

Question ID : 93336186

Option 1 ID : 933361341

Option 2 ID : 933361342

Option 3 ID : 933361343

Option 4 ID : 933361344

Status : Answered

Chosen Option : 1

Q.78 Where was the first-of-its kind Indian Air Force Heritage Centre inaugurated?

1. Hyderabad
2. Karnataka
3. Uttar Pradesh
4. Chandigarh

Options 1. 1

2. 2

3. 3

4. 4

Question Type : MCQ

Question ID : 93336195

Option 1 ID : 933361377

Option 2 ID : 933361378

Option 3 ID : 933361379

Option 4 ID : 933361380

Status : Answered

Chosen Option : 4



Q.79 Who was the scientist who voiced the count down of Chandrayaan-3, passed away recently?

1. V. R. Lalitambika
2. N. Valarmathi
3. Moumita Dutta
4. Tessie Thomas

Options 1. 1

2. 2
3. 3
4. 4

Question Type : **MCQ**

Question ID : **933361101**

Option 1 ID : **933361401**

Option 2 ID : **933361402**

Option 3 ID : **933361403**

Option 4 ID : **933361404**

Status : **Answered**

Chosen Option : **2**

Q.80 In which field 'Claudia Goldin' has received the Nobel Prize for 2023?

1. Economics
2. Physics
3. Peace
4. Chemistry

Options 1. 1

2. 2
3. 3
4. 4

Question Type : **MCQ**

Question ID : **93336198**

Option 1 ID : **933361389**

Option 2 ID : **933361390**

Option 3 ID : **933361391**

Option 4 ID : **933361392**

Status : **Answered**

Chosen Option : **1**



Q.81 Which battle was fought between Sher Shah Suri and Humayun in 1539?

1. The First Battle of Tarain
2. Battle of Samugarh
3. Battle of Chausa
4. Battle of Ghaghra

Options 1. 1

2. 2

3. 3

4. 4

Question Type : **MCQ**

Question ID : **93336180**

Option 1 ID : **933361317**

Option 2 ID : **933361318**

Option 3 ID : **933361319**

Option 4 ID : **933361320**

Status : **Not Answered**

Chosen Option : --

Q.82 Which of the following mountain ranges has kalumar peak as one of its highest point?

1. Nilgiri Ranges
2. Aravali Ranges
3. Vindhya Ranges
4. Pir Pranjol Mountain Ranges

Options 1. 1

2. 2

3. 3

4. 4

Question Type : **MCQ**

Question ID : **93336177**

Option 1 ID : **933361305**

Option 2 ID : **933361306**

Option 3 ID : **933361307**

Option 4 ID : **933361308**

Status : **Not Answered**

Chosen Option : --



Q.83 Match List I with List II

LIST I (Indian Notes)		LIST II (Pictures)	
A.	₹ 100	I.	Sanchi Stupa
B.	₹ 50	II.	Konark, Sun Temple
C.	₹ 200	III.	Hampi's with Chariot
D.	₹ 10	IV.	Rani Ki Vav

Choose the correct answer from the options given below:

1. A-III, B-I, C-IV, D-II
2. A-IV, B-III, C-I, D-II
3. A-IV, B-II, C-III, D-I
4. A-IV, B-I, C-II, D-III

Options 1. 1

2. 2

3. 3

4. 4

Question Type : MCQ

Question ID : 93336197

Option 1 ID : 933361385

Option 2 ID : 933361386

Option 3 ID : 933361387

Option 4 ID : 933361388

Status : Answered

Chosen Option : 2

Q.84 Who become the 82nd Chess Grandmaster of India?

1. GM Hans Niem
2. Praneeth Vuppala
3. Vignesh NR
4. Visakh NR

Options 1. 1

2. 2

3. 3

4. 4

Question Type : MCQ

Question ID : 93336199

Option 1 ID : 933361393

Option 2 ID : 933361394

Option 3 ID : 933361395

Option 4 ID : 933361396

Status : Not Answered

Chosen Option : --

Q.85 “Mukhya Mantri Khet Suraksha Yojana” is related to which of the following states?

1. Haryana
2. Himachal Pradesh
3. Uttar Pradesh
4. Chhattisgarh

Options 1. 1

2. 2

3. 3

4. 4

Question Type : MCQ

Question ID : 93336190

Option 1 ID : 933361357

Option 2 ID : 933361358

Option 3 ID : 933361359

Option 4 ID : 933361360

Status : Not Answered

Chosen Option : --

Q.86 Which Mela/Fair is listed in UNESCO’s list of Intangible Cultural Heritage of Humanity?

1. Pushkar Fair
2. Jagannath Rath-Yatra Mela
3. Gangasagar Mela
4. Kumbh Mela

Options 1. 1

2. 2

3. 3

4. 4

Question Type : MCQ

Question ID : 93336188

Option 1 ID : 933361349

Option 2 ID : 933361350

Option 3 ID : 933361351

Option 4 ID : 933361352

Status : Answered

Chosen Option : 2



Q.87 In Which state's Ramgarh Vishdhari Tiger Reserve was declared as the country's 52nd tiger reserve?

1. Madhya Pradesh
2. Rajasthan
3. Gujarat
4. Maharashtra

Options 1. 1

2. 2
3. 3
4. 4

Question Type : **MCQ**

Question ID : **93336176**

Option 1 ID : **933361301**

Option 2 ID : **933361302**

Option 3 ID : **933361303**

Option 4 ID : **933361304**

Status : **Not Answered**

Chosen Option : --

Q.88 Consider the following statements with respect to Constitution Provision adopted in Indian Constitution.

Statement - I : The idea of fundamental duties and the planning commission adopted from Soviet Constitution.

Statement - II : Proclamation of emergency, Ballet system adopted from Germany Constitution.

From the given options select appropriate answer

1. Only I is true.
2. Both I and II are true.
3. Only II is true.
4. Both I and II are false.

Options 1. 1

2. 2
3. 3
4. 4

Question Type : **MCQ**

Question ID : **93336182**

Option 1 ID : **933361325**

Option 2 ID : **933361326**

Option 3 ID : **933361327**

Option 4 ID : **933361328**

Status : **Not Answered**

Chosen Option : --



Q.89 Which Of the following is not directly controlled by RBI?

1. Bank rate
2. Repo rate
3. Base rate
4. Cash Reserve Ratio

Options 1. 1

2. 2

3. 3

4. 4

Question Type : MCQ

Question ID : 93336196

Option 1 ID : 933361381

Option 2 ID : 933361382

Option 3 ID : 933361383

Option 4 ID : 933361384

Status : Answered

Chosen Option : 1

Q.90 What was the theme of the G20 summit happened in India ,2023?

1. Shaping an interconnected world
2. Fighting Poverty with rigidity
3. "One earth-one family-one Future
4. Making the world together

Options 1. 1

2. 2

3. 3

4. 4

Question Type : MCQ

Question ID : 93336192

Option 1 ID : 933361365

Option 2 ID : 933361366

Option 3 ID : 933361367

Option 4 ID : 933361368

Status : Answered

Chosen Option : 3



Q.91 What is the name of India's First AI-Powered anti drone system?

1. Chetak
2. Gaganyaan
3. IndraJaal
4. Prakhar

Options 1. 1

2. 2
3. 3
4. 4

Question Type : **MCQ**

Question ID : **933361100**

Option 1 ID : **933361397**

Option 2 ID : **933361398**

Option 3 ID : **933361399**

Option 4 ID : **933361400**

Status : **Not Answered**

Chosen Option : --

Q.92 With which country did India participate in the Military Exercise "Nomadic Elephant - 2023?"

1. Mongolia
2. Indonesia
3. Thailand
4. France

Options 1. 1

2. 2
3. 3
4. 4

Question Type : **MCQ**

Question ID : **93336193**

Option 1 ID : **933361369**

Option 2 ID : **933361370**

Option 3 ID : **933361371**

Option 4 ID : **933361372**

Status : **Answered**

Chosen Option : **3**



Q.93 ISRO launched seven satellites of which country with PSLV-C56 rocket, In July-2023?

1. Cambodia
2. Sri Lanka
3. Singapore
4. Argentina

Options 1. 1

2. 2
3. 3
4. 4

Question Type : **MCQ**

Question ID : **93336194**

Option 1 ID : **933361373**

Option 2 ID : **933361374**

Option 3 ID : **933361375**

Option 4 ID : **933361376**

Status : **Not Answered**

Chosen Option : --

Q.94 The first person of Indian origin to receive Nobel Prize in medicine?

1. Dr. C. V. Raman
2. Amartya Sen
3. Hargobind Khurana
4. Homi Jehangir Bhabha

Options 1. 1

2. 2
3. 3
4. 4

Question Type : **MCQ**

Question ID : **93336178**

Option 1 ID : **933361309**

Option 2 ID : **933361310**

Option 3 ID : **933361311**

Option 4 ID : **933361312**

Status : **Answered**

Chosen Option : **3**



Q.95 According to Mahabharat, Babruvahana, was the son of Chitrangada (the Princess of Manipur) and _____

1. Duryodhana
2. Arjuna
3. Devvrata
4. Vidur

Options 1. 1

2. 2
3. 3
4. 4

Question Type : **MCQ**

Question ID : **93336189**

Option 1 ID : **933361353**

Option 2 ID : **933361354**

Option 3 ID : **933361355**

Option 4 ID : **933361356**

Status : **Not Answered**

Chosen Option : --

Q.96 Who has become the First Woman to receive the "Global India Awards" by the Canada - India foundation on October 4, 2023?

1. Rina Das
2. Sudha Murty
3. Aparna Bawa
4. Leena Nair

Options 1. 1

2. 2
3. 3
4. 4

Question Type : **MCQ**

Question ID : **933361104**

Option 1 ID : **933361413**

Option 2 ID : **933361414**

Option 3 ID : **933361415**

Option 4 ID : **933361416**

Status : **Not Answered**

Chosen Option : --



Q.97 The Gol Gumbaz in Vijayapura (formerly Bijapur) is the tomb of which ruler?

1. Mohammed Adil Shah
2. ShahJehan
3. Jahangir
4. Akbar

Options 1. 1

2. 2
3. 3
4. 4

Question Type : **MCQ**

Question ID : **93336181**

Option 1 ID : **933361321**

Option 2 ID : **933361322**

Option 3 ID : **933361323**

Option 4 ID : **933361324**

Status : **Not Answered**

Chosen Option : --

Q.98 Where was the “8th India International Science Festival” organized on January 21, 2023?

1. New Delhi
2. Ahmedabad
3. Bengaluru
4. Bhopal

Options 1. 1

2. 2
3. 3
4. 4

Question Type : **MCQ**

Question ID : **93336185**

Option 1 ID : **933361337**

Option 2 ID : **933361338**

Option 3 ID : **933361339**

Option 4 ID : **933361340**

Status : **Not Answered**

Chosen Option : --



Q.99 The words 'Satyameva jayate ' inscribed below the base Plate of the emblem of India are taken from:

1. Mundaka Upanishad
2. Ramayana
3. Satpath Brahmana
4. Ashtavakra Gita

Options 1. 1

2. 2
3. 3
4. 4

Question Type : **MCQ**

Question ID : **933361102**

Option 1 ID : **933361405**

Option 2 ID : **933361406**

Option 3 ID : **933361407**

Option 4 ID : **933361408**

Status : **Not Answered**

Chosen Option : --

Q.100 Who has become the first para - athlete to receive the Padma Bhushan Award?

1. Deepa Malik
2. Pooja Jattayan
3. Mariyappan Thangavelu
4. Devendra Jhajharia

Options 1. 1

2. 2
3. 3
4. 4

Question Type : **MCQ**

Question ID : **93336179**

Option 1 ID : **933361313**

Option 2 ID : **933361314**

Option 3 ID : **933361315**

Option 4 ID : **933361316**

Status : **Not Answered**

Chosen Option : --



Q.101 Pandit Shiv Kumar Sharma is an exponent of _____.

1. Veena
2. Santoor
3. Sitar
4. Mandolin

Options 1. 1

2. 2
3. 3
4. 4

Question Type : **MCQ**

Question ID : **93336187**

Option 1 ID : **933361345**

Option 2 ID : **933361346**

Option 3 ID : **933361347**

Option 4 ID : **933361348**

Status : **Not Answered**

Chosen Option : --

Q.102 Who has become the first Indian Female athlete to win a gold medal in Javelin throw in the History of Asian Games.

1. Alka Sinha
2. Anju Bobby George
3. Annu Rani
4. Preeti Chaudhary

Options 1. 1

2. 2
3. 3
4. 4

Question Type : **MCQ**

Question ID : **933361105**

Option 1 ID : **933361417**

Option 2 ID : **933361418**

Option 3 ID : **933361419**

Option 4 ID : **933361420**

Status : **Not Answered**

Chosen Option : --

Q.103 Who is known as the Rocket Woman of India?

1. Tessy Thomas
2. Sarla Thakral
3. Padma Bandopadhyay
4. Ritu Karidhal

Options 1. 1

2. 2

3. 3

4. 4

Question Type : **MCQ**

Question ID : **93336191**

Option 1 ID : **933361361**

Option 2 ID : **933361362**

Option 3 ID : **933361363**

Option 4 ID : **933361364**

Status : **Not Answered**

Chosen Option : --

Q.104 When is the "National Science Day" celebrated to commemorate the contribution of C. V. Raman?

1. 28th February
2. 20th February
3. 16th November
4. 14th January

Options 1. 1

2. 2

3. 3

4. 4

Question Type : **MCQ**

Question ID : **93336184**

Option 1 ID : **933361333**

Option 2 ID : **933361334**

Option 3 ID : **933361335**

Option 4 ID : **933361336**

Status : **Not Answered**

Chosen Option : --

Q.105 Where has the world's first "Manuscript Museum" of palm leaves been opened on January 6, 2023?

1. Tamil Nadu
2. Kerala
3. Uttarakhand
4. Assam

Options 1. 1

2. 2
3. 3
4. 4

Question Type : **MCQ**

Question ID : **93336183**

Option 1 ID : **933361329**

Option 2 ID : **933361330**

Option 3 ID : **933361331**

Option 4 ID : **933361332**

Status : **Not Answered**

Chosen Option : --

Section : General science

Q.106 Which of the following payload was the part of propulsion module in Chandrayaan-3?

1. APXS
2. ILSA
3. SHAPE
4. ChaSTE

Options 1. 1

2. 2
3. 3
4. 4

Question Type : **MCQ**

Question ID : **933361106**

Option 1 ID : **933361421**

Option 2 ID : **933361422**

Option 3 ID : **933361423**

Option 4 ID : **933361424**

Status : **Answered**

Chosen Option : **2**



Q.107 The interaction among the living organisms, where one is affected and other one is neither benefitted nor affected is known as:

1. Mutualism
2. Ammensalism
3. Commensalism
4. Parasitism

Options 1. 1

2. 2

3. 3

4. 4

Question Type : **MCQ**

Question ID : **933361127**

Option 1 ID : **933361505**

Option 2 ID : **933361506**

Option 3 ID : **933361507**

Option 4 ID : **933361508**

Status : **Not Answered**

Chosen Option : --

Q.108 Potato, Tomato and Brinjal are different species but all belong to the family _____.

1. Brassicaceae
2. Cucurbitaceae
3. Malvaceae
4. Solanaceae

Options 1. 1

2. 2

3. 3

4. 4

Question Type : **MCQ**

Question ID : **933361130**

Option 1 ID : **933361517**

Option 2 ID : **933361518**

Option 3 ID : **933361519**

Option 4 ID : **933361520**

Status : **Not Answered**

Chosen Option : --

Q.109 Arrange the following parts of the spectra in increasing order of their wavelength

- A. Visible range
- B. Infrared
- C. Ultraviolet
- D. Microwave

1. C-B-A-D

2. A-D-C-B

3. B-C-A-D

4. C-A-B-D

Options 1. 1

2. 2

3. 3

4. 4

Question Type : MCQ

Question ID : 933361123

Option 1 ID : 933361489

Option 2 ID : 933361490

Option 3 ID : 933361491

Option 4 ID : 933361492

Status : Answered

Chosen Option : 4

Q.110 Virtual testing of hypothetical concept is known as:

1. *In-silico* method

2. Laboratory experiments

3. *In-vivo* Research

4. *In-vitro* research

Options 1. 1

2. 2

3. 3

4. 4

Question Type : MCQ

Question ID : 933361121

Option 1 ID : 933361481

Option 2 ID : 933361482

Option 3 ID : 933361483

Option 4 ID : 933361484

Status : Answered

Chosen Option : 4



Q.111 DC generator works on the principle of -

1. Ohm's law
2. Joule's law of heating
3. Faraday's law of electromagnetic induction
4. Doppler effect

Options 1. 1

2. 2

3. 3

4. 4

Question Type : MCQ

Question ID : 933361125

Option 1 ID : 933361497

Option 2 ID : 933361498

Option 3 ID : 933361499

Option 4 ID : 933361500

Status : Answered

Chosen Option : 3

Q.112 The artificial sweetener generally present in diet colas is :

1. Stevinoids
2. Sucralose
3. Aspartame
4. Saccharin

Options 1. 1

2. 2

3. 3

4. 4

Question Type : MCQ

Question ID : 933361122

Option 1 ID : 933361485

Option 2 ID : 933361486

Option 3 ID : 933361487

Option 4 ID : 933361488

Status : Answered

Chosen Option : 2



Q.113 The scientific method in which, final conclusions and generalizations are drawn from, specific observations and analysis of known facts is known as:

1. Inductive method
2. Serendipity
3. Deductive method
4. Constructive method

Options 1. 1

2. 2

3. 3

4. 4

Question Type : **MCQ**

Question ID : **933361120**

Option 1 ID : **933361477**

Option 2 ID : **933361478**

Option 3 ID : **933361479**

Option 4 ID : **933361480**

Status : **Answered**

Chosen Option : **3**

Q.114 Study of fungi is called -

1. Fungiology
2. Mycology
3. Anthology
4. Mushroomology

Options 1. 1

2. 2

3. 3

4. 4

Question Type : **MCQ**

Question ID : **933361117**

Option 1 ID : **933361465**

Option 2 ID : **933361466**

Option 3 ID : **933361467**

Option 4 ID : **933361468**

Status : **Answered**

Chosen Option : **2**



Q.115 Unit of solid angle is -

1. Degree
2. Radian
3. Steradian
4. Radian-second

Options 1. 1

2. 2

3. 3

4. 4

Question Type : MCQ

Question ID : 933361118

Option 1 ID : 933361469

Option 2 ID : 933361470

Option 3 ID : 933361471

Option 4 ID : 933361472

Status : Answered

Chosen Option : 2

Q.116 S.I. unit of magnetic flux is -

1. weber
2. weber/m²
3. weber/m
4. weber-m²

Options 1. 1

2. 2

3. 3

4. 4

Question Type : MCQ

Question ID : 933361131

Option 1 ID : 933361521

Option 2 ID : 933361522

Option 3 ID : 933361523

Option 4 ID : 933361524

Status : Answered

Chosen Option : 1

Q.117 The value of 40° Celsius in Fahrenheit scale is -

1. 100°F
2. 102°F
3. 75°F
4. 104°F

Options 1. 1

2. 2

3. 3

4. 4

Question Type : MCQ

Question ID : 933361133

Option 1 ID : 933361529

Option 2 ID : 933361530

Option 3 ID : 933361531

Option 4 ID : 933361532

Status : Answered

Chosen Option : 4

Q.118 The highest contributor in the total global warming is :

1. Methane
2. Carbon dioxide
3. Chloro fluoro carbons
4. Nitrogen gas

Options 1. 1

2. 2

3. 3

4. 4

Question Type : MCQ

Question ID : 933361108

Option 1 ID : 933361429

Option 2 ID : 933361430

Option 3 ID : 933361431

Option 4 ID : 933361432

Status : Answered

Chosen Option : 1

Q.119 Among the following diseases, which is a sexually transmitted disease?

1. Elephantiasis
2. Hepatitis-B
3. Malaria
4. Filariasis

Options 1. 1

2. 2

3. 3

4. 4

Question Type : **MCQ**

Question ID : **933361135**

Option 1 ID : **933361537**

Option 2 ID : **933361538**

Option 3 ID : **933361539**

Option 4 ID : **933361540**

Status : **Answered**

Chosen Option : **2**

Q.120 The disease sleeping sickness is spread by -

1. Head louse
2. Sand flies
3. Bed bug
4. Tsetse flies

Options 1. 1

2. 2

3. 3

4. 4

Question Type : **MCQ**

Question ID : **933361115**

Option 1 ID : **933361457**

Option 2 ID : **933361458**

Option 3 ID : **933361459**

Option 4 ID : **933361460**

Status : **Not Answered**

Chosen Option : **--**

Q.121 Which one of the following is not a pure element?

1. Diamond
2. Oxygen
3. Graphite
4. Silica

Options 1. 1

2. 2

3. 3

4. 4

Question Type : MCQ

Question ID : 933361111

Option 1 ID : 933361441

Option 2 ID : 933361442

Option 3 ID : 933361443

Option 4 ID : 933361444

Status : Answered

Chosen Option : 1

Q.122 Match List I with List II

LIST I (Isotope)		LIST II (Application)	
A.	Carbon	I.	Treatment of goitre
B.	Cobalt	II.	Calculation of age of the earth
C.	Iodine	III.	Treatment of cancer
D.	Uranium	IV.	Fuel in nuclear reactor

Choose the correct answer from the options given below:

1. A-II, B-I, C-IV, D-III
2. A-III, B-IV, C-I, D-II
3. A-II, B-IV, C-I, D-III
4. A-II, B-III, C-I, D-IV

Options 1. 1

2. 2

3. 3

4. 4

Question Type : MCQ

Question ID : 933361124

Option 1 ID : 933361493

Option 2 ID : 933361494

Option 3 ID : 933361495

Option 4 ID : 933361496

Status : Answered

Chosen Option : 4

Q.123 The molarity of pure water is -

1. 100 mol/litre
2. 55.56 mol/litre
3. 68 mol/litre
4. 50 mol/litre

Options 1. 1

2. 2
3. 3
4. 4

Question Type : MCQ

Question ID : 933361116

Option 1 ID : 933361461

Option 2 ID : 933361462

Option 3 ID : 933361463

Option 4 ID : 933361464

Status : Answered

Chosen Option : 3

Q.124 The chemical present in tear gas which cause tears is:

1. Chlorobenzene
2. Bromobenzene
3. Chloro acetophenone
4. Di-chloro di-phenyl tri-chloro ethane (DDT)

Options 1. 1

2. 2
3. 3
4. 4

Question Type : MCQ

Question ID : 933361132

Option 1 ID : 933361525

Option 2 ID : 933361526

Option 3 ID : 933361527

Option 4 ID : 933361528

Status : Not Answered

Chosen Option : --



Q.125 Match List I with List II

LIST I (Name of Vitamin)		LIST II (Chemical Name)	
A.	Vitamin B ₁	I.	Pyridoxine
B.	Vitamin B ₂	II.	Cyano Cobalamin
C.	Vitamin B ₆	III.	Thiamine
D.	Vitamin B ₁₂	IV.	Riboflavin

Choose the correct answer from the options given below:

1. A-III, B-IV, C-I, D-II
2. A-III, B-I, C-II, D-IV
3. A-III, B-II, C-IV, D-I
4. A-IV, B-I, C-III, D-II

Options 1. 1

2. 2

3. 3

4. 4

Question Type : MCQ

Question ID : 933361114

Option 1 ID : 933361453

Option 2 ID : 933361454

Option 3 ID : 933361455

Option 4 ID : 933361456

Status : Answered

Chosen Option : 3



Q.126 Match List I with List II

LIST I (Scientific Theories)		LIST II (Explains about)	
A.	Plank's quantum theory	I.	Wave nature of electron
B.	Bohr's model	II.	Dual nature of electron
C.	De Broglie's equation	III.	Concept of Quantization of energy
D.	Schrodinger's wave equation	IV.	Photon and Quanta

Choose the correct answer from the options given below:

1. A-IV, B-I, C-II, D-III
2. A-II, B-IV, C-I, D-III
3. A-IV, B-III, C-II, D-I
4. A-IV, B-III, C-I, D-II

Options 1. 1

2. 2

3. 3

4. 4

Question Type : MCQ

Question ID : 933361112

Option 1 ID : 933361445

Option 2 ID : 933361446

Option 3 ID : 933361447

Option 4 ID : 933361448

Status : Not Attempted and
Marked For Review

Chosen Option : --

Q.127 The number of neutrons in an atom is equal to the :

1. Number of protons
2. Number of electrons + protons
3. Mass number – Atomic number
4. Atomic number

Options 1. 1

2. 2

3. 3

4. 4

Question Type : MCQ

Question ID : 933361134

Option 1 ID : 933361533

Option 2 ID : 933361534

Option 3 ID : 933361535

Option 4 ID : 933361536

Status : Not Attempted and
Marked For Review

Chosen Option : --



Q.128 Which of the following cannot be categorized as a cause of biodiversity losses?

1. Habitat loss and fragmentation
2. Over-exploitation
3. Co-evolution
4. Alien species invasion

Options 1. 1

2. 2

3. 3

4. 4

Question Type : **MCQ**

Question ID : **933361109**

Option 1 ID : **933361433**

Option 2 ID : **933361434**

Option 3 ID : **933361435**

Option 4 ID : **933361436**

Status : **Answered**

Chosen Option : **4**

Q.129 The gas responsible for Bhopal Gas Tragedy in 1984 was:

1. Methyl isocyanide
2. Ethyl isocyanide
3. Methyl thiocarbamide
4. Isopropyl cyanide

Options 1. 1

2. 2

3. 3

4. 4

Question Type : **MCQ**

Question ID : **933361128**

Option 1 ID : **933361509**

Option 2 ID : **933361510**

Option 3 ID : **933361511**

Option 4 ID : **933361512**

Status : **Answered**

Chosen Option : **1**

Q.130 Select the test most preferably and reliably used for detection of HIV infection?

1. Western Blotting
2. ELISA
3. Northern Blotting
4. Southern Blotting

Options 1. 1

2. 2

3. 3

4. 4

Question Type : **MCQ**

Question ID : **933361113**

Option 1 ID : **933361449**

Option 2 ID : **933361450**

Option 3 ID : **933361451**

Option 4 ID : **933361452**

Status : **Not Answered**

Chosen Option : --

Q.131 The common examples of photochemical smogs are all except:

1. Nitric oxide
2. Ozone
3. Peroxyacetyl nitrate
4. Methane

Options 1. 1

2. 2

3. 3

4. 4

Question Type : **MCQ**

Question ID : **933361110**

Option 1 ID : **933361437**

Option 2 ID : **933361438**

Option 3 ID : **933361439**

Option 4 ID : **933361440**

Status : **Answered**

Chosen Option : **3**

Q.132 The chemical used in limited quantity in foods to prevent spoilage of food due to microbial growth is:

1. Sodium lauryl sulphate
2. Chloroxylenol
3. Sodium benzoate
4. Sodium aspartate

Options 1. 1

2. 2
3. 3
4. 4

Question Type : **MCQ**

Question ID : **933361107**

Option 1 ID : **933361425**

Option 2 ID : **933361426**

Option 3 ID : **933361427**

Option 4 ID : **933361428**

Status : **Not Answered**

Chosen Option : --

Q.133 Transfer of an ovum collected from a donor into the fallopian tube of another female who cannot produce one is known as:

1. ZIFT
2. GIFT
3. IVF
4. ICSI

Options 1. 1

2. 2
3. 3
4. 4

Question Type : **MCQ**

Question ID : **933361129**

Option 1 ID : **933361513**

Option 2 ID : **933361514**

Option 3 ID : **933361515**

Option 4 ID : **933361516**

Status : **Answered**

Chosen Option : **3**

Q.134 The vaccine 'Covaxin' against Covid-19 was developed by:

1. AIIMS
2. Serological Institute of India
3. Bharat Biotech
4. Pfizer / Astra Zeneca

Options 1. 1

2. 2

3. 3

4. 4

Question Type : MCQ

Question ID : 933361126

Option 1 ID : 933361501

Option 2 ID : 933361502

Option 3 ID : 933361503

Option 4 ID : 933361504

Status : Answered

Chosen Option : 3

Q.135 If an object is placed at the focus of a convex lens, its image will form -

1. At the focus on the same side
2. At infinity
3. At the focus on the opposite side
4. Coincident with the lens

Options 1. 1

2. 2

3. 3

4. 4

Question Type : MCQ

Question ID : 933361119

Option 1 ID : 933361473

Option 2 ID : 933361474

Option 3 ID : 933361475

Option 4 ID : 933361476

Status : Answered

Chosen Option : 2

Q.136 What is the name of the Act of 1856, on protection of inventions, based on the British Patent Law of 1852? In which certain exclusive privileges granted to inventors of new manufacturers for a period of 14 years.

1. The Act V of 1856
2. The Act VI of 1856
3. The Act VII of 1856
4. The Act IX of 1856

Options 1. 1

2. 2
3. 3
4. 4

Question Type : **MCQ**

Question ID : **933361142**

Option 1 ID : **933361565**

Option 2 ID : **933361566**

Option 3 ID : **933361567**

Option 4 ID : **933361568**

Status : **Answered**

Chosen Option : **2**

Q.137 Which of the following is/are the organ of WIPO?

- A. General Assembly
- B. Coordination Committee
- C. Conference
- D. International Bureau

Choose the correct answer from the options given below :

1. A and B only
2. B, C and D only
3. A, B and C only
4. A, B, C and D only

Options 1. 1

2. 2
3. 3
4. 4

Question Type : **MCQ**

Question ID : **933361148**

Option 1 ID : **933361589**

Option 2 ID : **933361590**

Option 3 ID : **933361591**

Option 4 ID : **933361592**

Status : **Not Answered**

Chosen Option : **--**



Q.138 In order to get convention status, an applicant should file the application in the Indian patent office within _____, from the date of first filling similar application, in the convention country.

1. 12 months
2. 06 months
3. 01 months
4. 18 months

Options 1. 1

2. 2
3. 3
4. 4

Question Type : MCQ

Question ID : 933361147

Option 1 ID : 933361585

Option 2 ID : 933361586

Option 3 ID : 933361587

Option 4 ID : 933361588

Status : Answered

Chosen Option : 4

Q.139 Which of the following part of TRIPS under WTO covers 'Enforcement of Intellectual Property Rights'?

1. Part-II
2. Part-III
3. Part-IV
4. Part-V

Options 1. 1

2. 2
3. 3
4. 4

Question Type : MCQ

Question ID : 933361139

Option 1 ID : 933361553

Option 2 ID : 933361554

Option 3 ID : 933361555

Option 4 ID : 933361556

Status : Answered

Chosen Option : 3

Q.140 Semiconductor Integrated Circuits Layout-Design Act, 2000 (SICLDA) provides exclusive rights to the creator for:

1. 10 years from granting
2. 10 years from filling
3. 10 years from the death of inventor
4. 10 years from clearing objection

Options 1. 1

2. 2
3. 3
4. 4

Question Type : **MCQ**

Question ID : **933361140**

Option 1 ID : **933361557**

Option 2 ID : **933361558**

Option 3 ID : **933361559**

Option 4 ID : **933361560**

Status : **Answered**

Chosen Option : **2**

Q.141 India signed GATT and became GATT contracting party w.e.f.

1. 15th August 1947
2. 8th July 1948
3. 26th January, 1950
4. 26th November, 1949

Options 1. 1

2. 2
3. 3
4. 4

Question Type : **MCQ**

Question ID : **933361143**

Option 1 ID : **933361569**

Option 2 ID : **933361570**

Option 3 ID : **933361571**

Option 4 ID : **933361572**

Status : **Not Answered**

Chosen Option : **--**

Q.142 How many member states WIPO has as on 1st January 2023?

1. 190
2. 192
3. 193
4. 189

Options 1. 1

2. 2
3. 3
4. 4

Question Type : MCQ

Question ID : 933361150

Option 1 ID : 933361597

Option 2 ID : 933361598

Option 3 ID : 933361599

Option 4 ID : 933361600

Status : Not Answered

Chosen Option : --

Q.143 Mr Milky discovered a totally new way to process milk. Cheese made from it do not have any fat. Identify the applicable category of IPR.

1. Patent
2. Trade mark
3. Copyright
4. Industrial Design

Options 1. 1

2. 2
3. 3
4. 4

Question Type : MCQ

Question ID : 933361146

Option 1 ID : 933361581

Option 2 ID : 933361582

Option 3 ID : 933361583

Option 4 ID : 933361584

Status : Answered

Chosen Option : 1

Q.144 As per provisions of Article IV of WTO Ministerial Conference held at this city, also saw the trade ministers of the member countries, adopt a waiver that enabled the developed and developing countries, to provide preferential treatment to services and service supplier of Least Developed Country members till 2026.

1. Hongkong
2. Geneva
3. Seattle
4. Singapore

Options 1. 1

2. 2
3. 3
4. 4

Question Type : MCQ

Question ID : 933361137

Option 1 ID : 933361545

Option 2 ID : 933361546

Option 3 ID : 933361547

Option 4 ID : 933361548

Status : Not Answered

Chosen Option : --

Q.145 Meaning of Copyright is given under which Section of Copyright Act 1957?

1. Section 13
2. Section 14
3. Section 15
4. Section 18

Options 1. 1

2. 2
3. 3
4. 4

Question Type : MCQ

Question ID : 933361144

Option 1 ID : 933361573

Option 2 ID : 933361574

Option 3 ID : 933361575

Option 4 ID : 933361576

Status : Not Answered

Chosen Option : --

Q.146 Match List I with List II

LIST I (Ministerial Conference)		LIST II (Place)	
A.	First Ministerial Conference	I.	Geneva
B.	Third Ministerial Conference	II.	Hong Kong
C.	Sixth Ministerial Conference	III.	Seattle
D.	Eighth Ministerial Conference	IV.	Singapore

Choose the correct answer from the options given below:

1. A-IV, B-II, C-III, D-I
2. A-III, B-IV, C-II, D-I
3. A-I, B-II, C-III, D-IV
4. A-IV, B-III, C-II, D-I

Options 1. 1

2. 2

3. 3

4. 4

Question Type : MCQ

Question ID : 933361138

Option 1 ID : 933361549

Option 2 ID : 933361550

Option 3 ID : 933361551

Option 4 ID : 933361552

Status : Not Answered

Chosen Option : --

Q.147 Ms. Lekha has written an original story. What type of intellectual property gives her the right to decide, who can make and sell copies of her work?

1. Copyright
2. Registered designs
3. Trademarks
4. Patents

Options 1. 1

2. 2

3. 3

4. 4

Question Type : MCQ

Question ID : 933361149

Option 1 ID : 933361593

Option 2 ID : 933361594

Option 3 ID : 933361595

Option 4 ID : 933361596

Status : Answered

Chosen Option : 1



Q.148 Mr. Poet created a new poem. He performed that poem for the first time on 21st August 2000. He published his poem on 2nd January 2012. In a meeting on 4th February 2013 he discussed his plan for IPR protection of his work under Copyright Act. While on his way to perform the poem on 25th time Mr. Poet died on 31st December 2022. How long copyright of his work will be protected?

1. During 60 years post 21st August 2000.
2. During lifetime of Mr Poet plus 60 years beginning 1st January 2023.
3. During lifetime of Mr Poet plus 60 years beginning 31st December 2022.
4. Right is not protected, as it was only discussed and not registered.

Options 1. 1
2. 2
3. 3
4. 4

Question Type : MCQ

Question ID : 933361136

Option 1 ID : 933361541

Option 2 ID : 933361542

Option 3 ID : 933361543

Option 4 ID : 933361544

Status : Answered

Chosen Option : 4

Q.149 The Patents (Amendment) Act 2002, came into force from which date?

1. 20th May 2002
2. 1st January 2002
3. 1st January 2003
4. 20th May 2003

Options 1. 1
2. 2
3. 3
4. 4

Question Type : MCQ

Question ID : 933361141

Option 1 ID : 933361561

Option 2 ID : 933361562

Option 3 ID : 933361563

Option 4 ID : 933361564

Status : Not Answered

Chosen Option : --



Q.150 According to section 91(1) of Trade Marks Act 1999, no appeal shall be admitted in High Court if it is preferred after the expiry of the period :

1. 2 months
2. 3 months
3. 6 months
4. 9 months

Options 1. 1

2. 2

3. 3

4. 4

Question Type : **MCQ**

Question ID : **933361145**

Option 1 ID : **933361577**

Option 2 ID : **933361578**

Option 3 ID : **933361579**

Option 4 ID : **933361580**

Status : **Answered**

Chosen Option : **3**



SR No.	Question Number	Subject Name	Correct Options/Answers	Options/Answer for Challenge				
1.	9333611	General English	3	<input type="checkbox"/> 1	<input type="checkbox"/> 2	<input checked="" type="checkbox"/> 3	<input type="checkbox"/> 4	<input type="checkbox"/> None of These
2.	9333612	General English	1	<input checked="" type="checkbox"/> 1	<input type="checkbox"/> 2	<input type="checkbox"/> 3	<input type="checkbox"/> 4	<input type="checkbox"/> None of These
3.	9333613	General English	3	<input type="checkbox"/> 1	<input type="checkbox"/> 2	<input checked="" type="checkbox"/> 3	<input type="checkbox"/> 4	<input type="checkbox"/> None of These
4.	9333614	General English	3	<input type="checkbox"/> 1	<input type="checkbox"/> 2	<input checked="" type="checkbox"/> 3	<input type="checkbox"/> 4	<input type="checkbox"/> None of These
5.	9333615	General English	4	<input type="checkbox"/> 1	<input type="checkbox"/> 2	<input type="checkbox"/> 3	<input checked="" type="checkbox"/> 4	<input type="checkbox"/> None of These
6.	9333616	General English	2	<input type="checkbox"/> 1	<input checked="" type="checkbox"/> 2	<input type="checkbox"/> 3	<input type="checkbox"/> 4	<input type="checkbox"/> None of These
7.	9333617	General English	1	<input checked="" type="checkbox"/> 1	<input type="checkbox"/> 2	<input type="checkbox"/> 3	<input type="checkbox"/> 4	<input type="checkbox"/> None of These
8.	9333618	General English	1	<input checked="" type="checkbox"/> 1	<input type="checkbox"/> 2	<input type="checkbox"/> 3	<input type="checkbox"/> 4	<input type="checkbox"/> None of These
9.	9333619	General English	1	<input checked="" type="checkbox"/> 1	<input type="checkbox"/> 2	<input type="checkbox"/> 3	<input type="checkbox"/> 4	<input type="checkbox"/> None of These
10.	93336110	General English	2	<input type="checkbox"/> 1	<input checked="" type="checkbox"/> 2	<input type="checkbox"/> 3	<input type="checkbox"/> 4	<input type="checkbox"/> None of These
11.	93336111	General English	1	<input checked="" type="checkbox"/> 1	<input type="checkbox"/> 2	<input type="checkbox"/> 3	<input type="checkbox"/> 4	<input type="checkbox"/> None of These
12.	93336112	General English	2	<input type="checkbox"/> 1	<input checked="" type="checkbox"/> 2	<input type="checkbox"/> 3	<input type="checkbox"/> 4	<input type="checkbox"/> None of These
13.	93336113	General English	4	<input type="checkbox"/> 1	<input type="checkbox"/> 2	<input type="checkbox"/> 3	<input checked="" type="checkbox"/> 4	<input type="checkbox"/> None of These
14.	93336114	General English	2	<input type="checkbox"/> 1	<input checked="" type="checkbox"/> 2	<input type="checkbox"/> 3	<input type="checkbox"/> 4	<input type="checkbox"/> None of These
15.	93336115	General English	3	<input type="checkbox"/> 1	<input type="checkbox"/> 2	<input checked="" type="checkbox"/> 3	<input type="checkbox"/> 4	<input type="checkbox"/> None of These
16.	93336116	Verbal and Non Verbal Reasoning	1	<input checked="" type="checkbox"/> 1	<input type="checkbox"/> 2	<input type="checkbox"/> 3	<input type="checkbox"/> 4	<input type="checkbox"/> None of These
17.	93336117	Verbal and Non Verbal Reasoning	3	<input type="checkbox"/> 1	<input type="checkbox"/> 2	<input checked="" type="checkbox"/> 3	<input type="checkbox"/> 4	<input type="checkbox"/> None of These
18.	93336118	Verbal and Non Verbal Reasoning	2	<input type="checkbox"/> 1	<input checked="" type="checkbox"/> 2	<input type="checkbox"/> 3	<input type="checkbox"/> 4	<input type="checkbox"/> None of These
19.	93336119	Verbal and Non Verbal Reasoning	2	<input type="checkbox"/> 1	<input checked="" type="checkbox"/> 2	<input type="checkbox"/> 3	<input type="checkbox"/> 4	<input type="checkbox"/> None of These
20.	93336120	Verbal and Non Verbal Reasoning	4	<input type="checkbox"/> 1	<input type="checkbox"/> 2	<input type="checkbox"/> 3	<input checked="" type="checkbox"/> 4	<input type="checkbox"/> None of These
21.	93336121	Verbal and Non Verbal Reasoning	2	<input type="checkbox"/> 1	<input checked="" type="checkbox"/> 2	<input type="checkbox"/> 3	<input type="checkbox"/> 4	<input type="checkbox"/> None of These
22.	93336122	Verbal and Non Verbal Reasoning	2	<input type="checkbox"/> 1	<input checked="" type="checkbox"/> 2	<input type="checkbox"/> 3	<input type="checkbox"/> 4	<input type="checkbox"/> None of These
23.	93336123	Verbal and Non Verbal Reasoning	2	<input type="checkbox"/> 1	<input checked="" type="checkbox"/> 2	<input type="checkbox"/> 3	<input type="checkbox"/> 4	<input type="checkbox"/> None of These
24.	93336124	Verbal and Non Verbal Reasoning	2	<input type="checkbox"/> 1	<input checked="" type="checkbox"/> 2	<input type="checkbox"/> 3	<input type="checkbox"/> 4	<input type="checkbox"/> None of These
25.	93336125	Verbal and Non Verbal Reasoning	2	<input type="checkbox"/> 1	<input checked="" type="checkbox"/> 2	<input type="checkbox"/> 3	<input type="checkbox"/> 4	<input type="checkbox"/> None of These
26.	93336126	Verbal and Non Verbal Reasoning	4	<input type="checkbox"/> 1	<input type="checkbox"/> 2	<input type="checkbox"/> 3	<input checked="" type="checkbox"/> 4	<input type="checkbox"/> None of These
27.	93336127	Verbal and Non Verbal Reasoning	4	<input type="checkbox"/> 1	<input type="checkbox"/> 2	<input type="checkbox"/> 3	<input checked="" type="checkbox"/> 4	<input type="checkbox"/> None of These
28.	93336128	Verbal and Non Verbal Reasoning	1	<input checked="" type="checkbox"/> 1	<input type="checkbox"/> 2	<input type="checkbox"/> 3	<input type="checkbox"/> 4	<input type="checkbox"/> None of These

SR No.	Question Number	Subject Name	Correct Options/Answers	Options/Answer for Challenge				
29.	93336129	Verbal and Non Verbal Reasoning	4	<input type="checkbox"/> 1	<input type="checkbox"/> 2	<input type="checkbox"/> 3	<input checked="" type="checkbox"/> 4	<input type="checkbox"/> None of These
30.	93336130	Verbal and Non Verbal Reasoning	4	<input type="checkbox"/> 1	<input type="checkbox"/> 2	<input type="checkbox"/> 3	<input checked="" type="checkbox"/> 4	<input type="checkbox"/> None of These
31.	93336131	Verbal and Non Verbal Reasoning	3	<input type="checkbox"/> 1	<input type="checkbox"/> 2	<input checked="" type="checkbox"/> 3	<input type="checkbox"/> 4	<input type="checkbox"/> None of These
32.	93336132	Verbal and Non Verbal Reasoning	1	<input checked="" type="checkbox"/> 1	<input type="checkbox"/> 2	<input type="checkbox"/> 3	<input type="checkbox"/> 4	<input type="checkbox"/> None of These
33.	93336133	Verbal and Non Verbal Reasoning	3	<input type="checkbox"/> 1	<input type="checkbox"/> 2	<input checked="" type="checkbox"/> 3	<input type="checkbox"/> 4	<input type="checkbox"/> None of These
34.	93336134	Verbal and Non Verbal Reasoning	1	<input checked="" type="checkbox"/> 1	<input type="checkbox"/> 2	<input type="checkbox"/> 3	<input type="checkbox"/> 4	<input type="checkbox"/> None of These
35.	93336135	Verbal and Non Verbal Reasoning	2	<input type="checkbox"/> 1	<input checked="" type="checkbox"/> 2	<input type="checkbox"/> 3	<input type="checkbox"/> 4	<input type="checkbox"/> None of These
36.	93336136	Verbal and Non Verbal Reasoning	2	<input type="checkbox"/> 1	<input checked="" type="checkbox"/> 2	<input type="checkbox"/> 3	<input type="checkbox"/> 4	<input type="checkbox"/> None of These
37.	93336137	Verbal and Non Verbal Reasoning	3	<input type="checkbox"/> 1	<input type="checkbox"/> 2	<input checked="" type="checkbox"/> 3	<input type="checkbox"/> 4	<input type="checkbox"/> None of These
38.	93336138	Verbal and Non Verbal Reasoning	4	<input type="checkbox"/> 1	<input type="checkbox"/> 2	<input type="checkbox"/> 3	<input checked="" type="checkbox"/> 4	<input type="checkbox"/> None of These
39.	93336139	Verbal and Non Verbal Reasoning	2	<input type="checkbox"/> 1	<input checked="" type="checkbox"/> 2	<input type="checkbox"/> 3	<input type="checkbox"/> 4	<input type="checkbox"/> None of These
40.	93336140	Verbal and Non Verbal Reasoning	3	<input type="checkbox"/> 1	<input type="checkbox"/> 2	<input checked="" type="checkbox"/> 3	<input type="checkbox"/> 4	<input type="checkbox"/> None of These
41.	93336141	Verbal and Non Verbal Reasoning	3	<input type="checkbox"/> 1	<input type="checkbox"/> 2	<input checked="" type="checkbox"/> 3	<input type="checkbox"/> 4	<input type="checkbox"/> None of These
42.	93336142	Verbal and Non Verbal Reasoning	4	<input type="checkbox"/> 1	<input type="checkbox"/> 2	<input type="checkbox"/> 3	<input checked="" type="checkbox"/> 4	<input type="checkbox"/> None of These
43.	93336143	Verbal and Non Verbal Reasoning	1	<input checked="" type="checkbox"/> 1	<input type="checkbox"/> 2	<input type="checkbox"/> 3	<input type="checkbox"/> 4	<input type="checkbox"/> None of These
44.	93336144	Verbal and Non Verbal Reasoning	1	<input checked="" type="checkbox"/> 1	<input type="checkbox"/> 2	<input type="checkbox"/> 3	<input type="checkbox"/> 4	<input type="checkbox"/> None of These
45.	93336145	Verbal and Non Verbal Reasoning	2	<input type="checkbox"/> 1	<input checked="" type="checkbox"/> 2	<input type="checkbox"/> 3	<input type="checkbox"/> 4	<input type="checkbox"/> None of These
46.	93336146	Quantitative Aptitude	2	<input type="checkbox"/> 1	<input checked="" type="checkbox"/> 2	<input type="checkbox"/> 3	<input type="checkbox"/> 4	<input type="checkbox"/> None of These
47.	93336147	Quantitative Aptitude	4	<input type="checkbox"/> 1	<input type="checkbox"/> 2	<input type="checkbox"/> 3	<input checked="" type="checkbox"/> 4	<input type="checkbox"/> None of These
48.	93336148	Quantitative Aptitude	2	<input type="checkbox"/> 1	<input checked="" type="checkbox"/> 2	<input type="checkbox"/> 3	<input type="checkbox"/> 4	<input type="checkbox"/> None of These
49.	93336149	Quantitative Aptitude	3	<input type="checkbox"/> 1	<input type="checkbox"/> 2	<input checked="" type="checkbox"/> 3	<input type="checkbox"/> 4	<input type="checkbox"/> None of These
50.	93336150	Quantitative Aptitude	3	<input type="checkbox"/> 1	<input type="checkbox"/> 2	<input checked="" type="checkbox"/> 3	<input type="checkbox"/> 4	<input type="checkbox"/> None of These
51.	93336151	Quantitative Aptitude	2	<input type="checkbox"/> 1	<input checked="" type="checkbox"/> 2	<input type="checkbox"/> 3	<input type="checkbox"/> 4	<input type="checkbox"/> None of These
52.	93336152	Quantitative Aptitude	3	<input type="checkbox"/> 1	<input type="checkbox"/> 2	<input checked="" type="checkbox"/> 3	<input type="checkbox"/> 4	<input type="checkbox"/> None of These
53.	93336153	Quantitative Aptitude	1	<input checked="" type="checkbox"/> 1	<input type="checkbox"/> 2	<input type="checkbox"/> 3	<input type="checkbox"/> 4	<input type="checkbox"/> None of These
54.	93336154	Quantitative Aptitude	4	<input type="checkbox"/> 1	<input type="checkbox"/> 2	<input type="checkbox"/> 3	<input checked="" type="checkbox"/> 4	<input type="checkbox"/> None of These
55.	93336155	Quantitative	3	<input type="checkbox"/> 1	<input type="checkbox"/> 2	<input checked="" type="checkbox"/> 3	<input type="checkbox"/> 4	<input type="checkbox"/> None of These

SR No.	Question Number	Subject Name	Correct Options/Answers	Options/Answer for Challenge
		Aptitude		
56.	93336156	Quantitative Aptitude	1	<input checked="" type="checkbox"/> 1 <input type="checkbox"/> 2 <input type="checkbox"/> 3 <input type="checkbox"/> 4 <input type="checkbox"/> None of These
57.	93336157	Quantitative Aptitude	3	<input type="checkbox"/> 1 <input type="checkbox"/> 2 <input checked="" type="checkbox"/> 3 <input type="checkbox"/> 4 <input type="checkbox"/> None of These
58.	93336158	Quantitative Aptitude	1	<input checked="" type="checkbox"/> 1 <input type="checkbox"/> 2 <input type="checkbox"/> 3 <input type="checkbox"/> 4 <input type="checkbox"/> None of These
59.	93336159	Quantitative Aptitude	3	<input type="checkbox"/> 1 <input type="checkbox"/> 2 <input checked="" type="checkbox"/> 3 <input type="checkbox"/> 4 <input type="checkbox"/> None of These
60.	93336160	Quantitative Aptitude	2	<input type="checkbox"/> 1 <input checked="" type="checkbox"/> 2 <input type="checkbox"/> 3 <input type="checkbox"/> 4 <input type="checkbox"/> None of These
61.	93336161	Quantitative Aptitude	4	<input type="checkbox"/> 1 <input type="checkbox"/> 2 <input type="checkbox"/> 3 <input checked="" type="checkbox"/> 4 <input type="checkbox"/> None of These
62.	93336162	Quantitative Aptitude	2	<input type="checkbox"/> 1 <input checked="" type="checkbox"/> 2 <input type="checkbox"/> 3 <input type="checkbox"/> 4 <input type="checkbox"/> None of These
63.	93336163	Quantitative Aptitude	2	<input type="checkbox"/> 1 <input checked="" type="checkbox"/> 2 <input type="checkbox"/> 3 <input type="checkbox"/> 4 <input type="checkbox"/> None of These
64.	93336164	Quantitative Aptitude	4	<input type="checkbox"/> 1 <input type="checkbox"/> 2 <input type="checkbox"/> 3 <input checked="" type="checkbox"/> 4 <input type="checkbox"/> None of These
65.	93336165	Quantitative Aptitude	3	<input type="checkbox"/> 1 <input type="checkbox"/> 2 <input checked="" type="checkbox"/> 3 <input type="checkbox"/> 4 <input type="checkbox"/> None of These
66.	93336166	Quantitative Aptitude	3	<input type="checkbox"/> 1 <input type="checkbox"/> 2 <input checked="" type="checkbox"/> 3 <input type="checkbox"/> 4 <input type="checkbox"/> None of These
67.	93336167	Quantitative Aptitude	3	<input type="checkbox"/> 1 <input type="checkbox"/> 2 <input checked="" type="checkbox"/> 3 <input type="checkbox"/> 4 <input type="checkbox"/> None of These
68.	93336168	Quantitative Aptitude	4	<input type="checkbox"/> 1 <input type="checkbox"/> 2 <input type="checkbox"/> 3 <input checked="" type="checkbox"/> 4 <input type="checkbox"/> None of These
69.	93336169	Quantitative Aptitude	1	<input checked="" type="checkbox"/> 1 <input type="checkbox"/> 2 <input type="checkbox"/> 3 <input type="checkbox"/> 4 <input type="checkbox"/> None of These
70.	93336170	Quantitative Aptitude	3	<input type="checkbox"/> 1 <input type="checkbox"/> 2 <input checked="" type="checkbox"/> 3 <input type="checkbox"/> 4 <input type="checkbox"/> None of These
71.	93336171	Quantitative Aptitude	2	<input type="checkbox"/> 1 <input checked="" type="checkbox"/> 2 <input type="checkbox"/> 3 <input type="checkbox"/> 4 <input type="checkbox"/> None of These
72.	93336172	Quantitative Aptitude	2	<input type="checkbox"/> 1 <input checked="" type="checkbox"/> 2 <input type="checkbox"/> 3 <input type="checkbox"/> 4 <input type="checkbox"/> None of These
73.	93336173	Quantitative Aptitude	2	<input type="checkbox"/> 1 <input checked="" type="checkbox"/> 2 <input type="checkbox"/> 3 <input type="checkbox"/> 4 <input type="checkbox"/> None of These
74.	93336174	Quantitative Aptitude	2	<input type="checkbox"/> 1 <input checked="" type="checkbox"/> 2 <input type="checkbox"/> 3 <input type="checkbox"/> 4 <input type="checkbox"/> None of These
75.	93336175	Quantitative Aptitude	2	<input type="checkbox"/> 1 <input checked="" type="checkbox"/> 2 <input type="checkbox"/> 3 <input type="checkbox"/> 4 <input type="checkbox"/> None of These
76.	93336176	General Knowledge and Current Affairs	2	<input type="checkbox"/> 1 <input checked="" type="checkbox"/> 2 <input type="checkbox"/> 3 <input type="checkbox"/> 4 <input type="checkbox"/> None of These
77.	93336177	General Knowledge and Current Affairs	3	<input type="checkbox"/> 1 <input type="checkbox"/> 2 <input checked="" type="checkbox"/> 3 <input type="checkbox"/> 4 <input type="checkbox"/> None of These
78.	93336178	General Knowledge and Current Affairs	3	<input type="checkbox"/> 1 <input type="checkbox"/> 2 <input checked="" type="checkbox"/> 3 <input type="checkbox"/> 4 <input type="checkbox"/> None of These
79.	93336179	General Knowledge and Current Affairs	4	<input type="checkbox"/> 1 <input type="checkbox"/> 2 <input type="checkbox"/> 3 <input checked="" type="checkbox"/> 4 <input type="checkbox"/> None of These
80.	93336180	General Knowledge and	3	<input type="checkbox"/> 1 <input type="checkbox"/> 2 <input checked="" type="checkbox"/> 3 <input type="checkbox"/> 4 <input type="checkbox"/> None of These

SR No.	Question Number	Subject Name	Correct Options/Answers	Options/Answer for Challenge
		Current Affairs		
81.	93336181	General Knowledge and Current Affairs	1	<input checked="" type="checkbox"/> 1 <input type="checkbox"/> 2 <input type="checkbox"/> 3 <input type="checkbox"/> 4 <input type="checkbox"/> None of These
82.	93336182	General Knowledge and Current Affairs	2	<input type="checkbox"/> 1 <input checked="" type="checkbox"/> 2 <input type="checkbox"/> 3 <input type="checkbox"/> 4 <input type="checkbox"/> None of These
83.	93336183	General Knowledge and Current Affairs	2	<input type="checkbox"/> 1 <input checked="" type="checkbox"/> 2 <input type="checkbox"/> 3 <input type="checkbox"/> 4 <input type="checkbox"/> None of These
84.	93336184	General Knowledge and Current Affairs	1	<input checked="" type="checkbox"/> 1 <input type="checkbox"/> 2 <input type="checkbox"/> 3 <input type="checkbox"/> 4 <input type="checkbox"/> None of These
85.	93336185	General Knowledge and Current Affairs	4	<input type="checkbox"/> 1 <input type="checkbox"/> 2 <input type="checkbox"/> 3 <input checked="" type="checkbox"/> 4 <input type="checkbox"/> None of These
86.	93336186	General Knowledge and Current Affairs	4	<input type="checkbox"/> 1 <input type="checkbox"/> 2 <input type="checkbox"/> 3 <input checked="" type="checkbox"/> 4 <input type="checkbox"/> None of These
87.	93336187	General Knowledge and Current Affairs	2	<input type="checkbox"/> 1 <input checked="" type="checkbox"/> 2 <input type="checkbox"/> 3 <input type="checkbox"/> 4 <input type="checkbox"/> None of These
88.	93336188	General Knowledge and Current Affairs	4	<input type="checkbox"/> 1 <input type="checkbox"/> 2 <input type="checkbox"/> 3 <input checked="" type="checkbox"/> 4 <input type="checkbox"/> None of These
89.	93336189	General Knowledge and Current Affairs	2	<input type="checkbox"/> 1 <input checked="" type="checkbox"/> 2 <input type="checkbox"/> 3 <input type="checkbox"/> 4 <input type="checkbox"/> None of These
90.	93336190	General Knowledge and Current Affairs	3	<input type="checkbox"/> 1 <input type="checkbox"/> 2 <input checked="" type="checkbox"/> 3 <input type="checkbox"/> 4 <input type="checkbox"/> None of These
91.	93336191	General Knowledge and Current Affairs	4	<input type="checkbox"/> 1 <input type="checkbox"/> 2 <input type="checkbox"/> 3 <input checked="" type="checkbox"/> 4 <input type="checkbox"/> None of These
92.	93336192	General Knowledge and Current Affairs	3	<input type="checkbox"/> 1 <input type="checkbox"/> 2 <input checked="" type="checkbox"/> 3 <input type="checkbox"/> 4 <input type="checkbox"/> None of These
93.	93336193	General Knowledge and Current Affairs	1	<input checked="" type="checkbox"/> 1 <input type="checkbox"/> 2 <input type="checkbox"/> 3 <input type="checkbox"/> 4 <input type="checkbox"/> None of These
94.	93336194	General Knowledge and Current Affairs	3	<input type="checkbox"/> 1 <input type="checkbox"/> 2 <input checked="" type="checkbox"/> 3 <input type="checkbox"/> 4 <input type="checkbox"/> None of These
95.	93336195	General Knowledge and Current Affairs	4	<input type="checkbox"/> 1 <input type="checkbox"/> 2 <input type="checkbox"/> 3 <input checked="" type="checkbox"/> 4 <input type="checkbox"/> None of These
96.	93336196	General Knowledge and Current Affairs	3	<input type="checkbox"/> 1 <input type="checkbox"/> 2 <input checked="" type="checkbox"/> 3 <input type="checkbox"/> 4 <input type="checkbox"/> None of These
97.	93336197	General Knowledge and Current Affairs	2	<input type="checkbox"/> 1 <input checked="" type="checkbox"/> 2 <input type="checkbox"/> 3 <input type="checkbox"/> 4 <input type="checkbox"/> None of These
98.	93336198	General Knowledge and Current Affairs	1	<input checked="" type="checkbox"/> 1 <input type="checkbox"/> 2 <input type="checkbox"/> 3 <input type="checkbox"/> 4 <input type="checkbox"/> None of These
99.	93336199	General Knowledge and Current Affairs	2	<input type="checkbox"/> 1 <input checked="" type="checkbox"/> 2 <input type="checkbox"/> 3 <input type="checkbox"/> 4 <input type="checkbox"/> None of These
100.	933361100	General Knowledge and	3	<input type="checkbox"/> 1 <input type="checkbox"/> 2 <input checked="" type="checkbox"/> 3 <input type="checkbox"/> 4 <input type="checkbox"/> None of These

SR No.	Question Number	Subject Name	Correct Options/Answers	Options/Answer for Challenge
		Current Affairs		
101.	933361101	General Knowledge and Current Affairs	2	<input type="checkbox"/> 1 <input checked="" type="checkbox"/> 2 <input type="checkbox"/> 3 <input type="checkbox"/> 4 <input type="checkbox"/> None of These
102.	933361102	General Knowledge and Current Affairs	1	<input checked="" type="checkbox"/> 1 <input type="checkbox"/> 2 <input type="checkbox"/> 3 <input type="checkbox"/> 4 <input type="checkbox"/> None of These
103.	933361103	General Knowledge and Current Affairs	1	<input checked="" type="checkbox"/> 1 <input type="checkbox"/> 2 <input type="checkbox"/> 3 <input type="checkbox"/> 4 <input type="checkbox"/> None of These
104.	933361104	General Knowledge and Current Affairs	2	<input type="checkbox"/> 1 <input checked="" type="checkbox"/> 2 <input type="checkbox"/> 3 <input type="checkbox"/> 4 <input type="checkbox"/> None of These
105.	933361105	General Knowledge and Current Affairs	3	<input type="checkbox"/> 1 <input type="checkbox"/> 2 <input checked="" type="checkbox"/> 3 <input type="checkbox"/> 4 <input type="checkbox"/> None of These
106.	933361106	General Science	3	<input type="checkbox"/> 1 <input type="checkbox"/> 2 <input checked="" type="checkbox"/> 3 <input type="checkbox"/> 4 <input type="checkbox"/> None of These
107.	933361107	General Science	3	<input type="checkbox"/> 1 <input type="checkbox"/> 2 <input checked="" type="checkbox"/> 3 <input type="checkbox"/> 4 <input type="checkbox"/> None of These
108.	933361108	General Science	2	<input type="checkbox"/> 1 <input checked="" type="checkbox"/> 2 <input type="checkbox"/> 3 <input type="checkbox"/> 4 <input type="checkbox"/> None of These
109.	933361109	General Science	3	<input type="checkbox"/> 1 <input type="checkbox"/> 2 <input checked="" type="checkbox"/> 3 <input type="checkbox"/> 4 <input type="checkbox"/> None of These
110.	933361110	General Science	4	<input type="checkbox"/> 1 <input type="checkbox"/> 2 <input type="checkbox"/> 3 <input checked="" type="checkbox"/> 4 <input type="checkbox"/> None of These
111.	933361111	General Science	4	<input type="checkbox"/> 1 <input type="checkbox"/> 2 <input type="checkbox"/> 3 <input checked="" type="checkbox"/> 4 <input type="checkbox"/> None of These
112.	933361112	General Science	3	<input type="checkbox"/> 1 <input type="checkbox"/> 2 <input checked="" type="checkbox"/> 3 <input type="checkbox"/> 4 <input type="checkbox"/> None of These
113.	933361113	General Science	2	<input type="checkbox"/> 1 <input checked="" type="checkbox"/> 2 <input type="checkbox"/> 3 <input type="checkbox"/> 4 <input type="checkbox"/> None of These
114.	933361114	General Science	1	<input checked="" type="checkbox"/> 1 <input type="checkbox"/> 2 <input type="checkbox"/> 3 <input type="checkbox"/> 4 <input type="checkbox"/> None of These
115.	933361115	General Science	4	<input type="checkbox"/> 1 <input type="checkbox"/> 2 <input type="checkbox"/> 3 <input checked="" type="checkbox"/> 4 <input type="checkbox"/> None of These
116.	933361116	General Science	2	<input type="checkbox"/> 1 <input checked="" type="checkbox"/> 2 <input type="checkbox"/> 3 <input type="checkbox"/> 4 <input type="checkbox"/> None of These
117.	933361117	General Science	2	<input type="checkbox"/> 1 <input checked="" type="checkbox"/> 2 <input type="checkbox"/> 3 <input type="checkbox"/> 4 <input type="checkbox"/> None of These
118.	933361118	General Science	3	<input type="checkbox"/> 1 <input type="checkbox"/> 2 <input checked="" type="checkbox"/> 3 <input type="checkbox"/> 4 <input type="checkbox"/> None of These
119.	933361119	General Science	2	<input type="checkbox"/> 1 <input checked="" type="checkbox"/> 2 <input type="checkbox"/> 3 <input type="checkbox"/> 4 <input type="checkbox"/> None of These
120.	933361120	General Science	1	<input checked="" type="checkbox"/> 1 <input type="checkbox"/> 2 <input type="checkbox"/> 3 <input type="checkbox"/> 4 <input type="checkbox"/> None of These
121.	933361121	General Science	1	<input checked="" type="checkbox"/> 1 <input type="checkbox"/> 2 <input type="checkbox"/> 3 <input type="checkbox"/> 4 <input type="checkbox"/> None of These
122.	933361122	General Science	3	<input type="checkbox"/> 1 <input type="checkbox"/> 2 <input checked="" type="checkbox"/> 3 <input type="checkbox"/> 4 <input type="checkbox"/> None of These
123.	933361123	General Science	4	<input type="checkbox"/> 1 <input type="checkbox"/> 2 <input type="checkbox"/> 3 <input checked="" type="checkbox"/> 4 <input type="checkbox"/> None of These
124.	933361124	General Science	4	<input type="checkbox"/> 1 <input type="checkbox"/> 2 <input type="checkbox"/> 3 <input checked="" type="checkbox"/> 4 <input type="checkbox"/> None of These
125.	933361125	General Science	3	<input type="checkbox"/> 1 <input type="checkbox"/> 2 <input checked="" type="checkbox"/> 3 <input type="checkbox"/> 4 <input type="checkbox"/> None of These
126.	933361126	General Science	3	<input type="checkbox"/> 1 <input type="checkbox"/> 2 <input checked="" type="checkbox"/> 3 <input type="checkbox"/> 4 <input type="checkbox"/> None of These
127.	933361127	General Science	2	<input type="checkbox"/> 1 <input checked="" type="checkbox"/> 2 <input type="checkbox"/> 3 <input type="checkbox"/> 4 <input type="checkbox"/> None of These
128.	933361128	General Science	1	<input checked="" type="checkbox"/> 1 <input type="checkbox"/> 2 <input type="checkbox"/> 3 <input type="checkbox"/> 4 <input type="checkbox"/> None of These
129.	933361129	General Science	2	<input type="checkbox"/> 1 <input checked="" type="checkbox"/> 2 <input type="checkbox"/> 3 <input type="checkbox"/> 4 <input type="checkbox"/> None of These



SR No.	Question Number	Subject Name	Correct Options/Answers	Options/Answer for Challenge
130.	933361130	General Science	4	<input type="checkbox"/> 1 <input type="checkbox"/> 2 <input type="checkbox"/> 3 <input checked="" type="checkbox"/> 4 <input type="checkbox"/> None of These
131.	933361131	General Science	1	<input checked="" type="checkbox"/> 1 <input type="checkbox"/> 2 <input type="checkbox"/> 3 <input type="checkbox"/> 4 <input type="checkbox"/> None of These
132.	933361132	General Science	3	<input type="checkbox"/> 1 <input type="checkbox"/> 2 <input checked="" type="checkbox"/> 3 <input type="checkbox"/> 4 <input type="checkbox"/> None of These
133.	933361133	General Science	4	<input type="checkbox"/> 1 <input type="checkbox"/> 2 <input type="checkbox"/> 3 <input checked="" type="checkbox"/> 4 <input type="checkbox"/> None of These
134.	933361134	General Science	3	<input type="checkbox"/> 1 <input type="checkbox"/> 2 <input checked="" type="checkbox"/> 3 <input type="checkbox"/> 4 <input type="checkbox"/> None of These
135.	933361135	General Science	2	<input type="checkbox"/> 1 <input checked="" type="checkbox"/> 2 <input type="checkbox"/> 3 <input type="checkbox"/> 4 <input type="checkbox"/> None of These
136.	933361136	IP Legislation, WIPO	2	<input type="checkbox"/> 1 <input checked="" type="checkbox"/> 2 <input type="checkbox"/> 3 <input type="checkbox"/> 4 <input type="checkbox"/> None of These
137.	933361137	IP Legislation, WIPO	2	<input type="checkbox"/> 1 <input checked="" type="checkbox"/> 2 <input type="checkbox"/> 3 <input type="checkbox"/> 4 <input type="checkbox"/> None of These
138.	933361138	IP Legislation, WIPO	4	<input type="checkbox"/> 1 <input type="checkbox"/> 2 <input type="checkbox"/> 3 <input checked="" type="checkbox"/> 4 <input type="checkbox"/> None of These
139.	933361139	IP Legislation, WIPO	2	<input type="checkbox"/> 1 <input checked="" type="checkbox"/> 2 <input type="checkbox"/> 3 <input type="checkbox"/> 4 <input type="checkbox"/> None of These
140.	933361140	IP Legislation, WIPO	2	<input type="checkbox"/> 1 <input checked="" type="checkbox"/> 2 <input type="checkbox"/> 3 <input type="checkbox"/> 4 <input type="checkbox"/> None of These
141.	933361141	IP Legislation, WIPO	4	<input type="checkbox"/> 1 <input type="checkbox"/> 2 <input type="checkbox"/> 3 <input checked="" type="checkbox"/> 4 <input type="checkbox"/> None of These
142.	933361142	IP Legislation, WIPO	2	<input type="checkbox"/> 1 <input checked="" type="checkbox"/> 2 <input type="checkbox"/> 3 <input type="checkbox"/> 4 <input type="checkbox"/> None of These
143.	933361143	IP Legislation, WIPO	2	<input type="checkbox"/> 1 <input checked="" type="checkbox"/> 2 <input type="checkbox"/> 3 <input type="checkbox"/> 4 <input type="checkbox"/> None of These
144.	933361144	IP Legislation, WIPO	2	<input type="checkbox"/> 1 <input checked="" type="checkbox"/> 2 <input type="checkbox"/> 3 <input type="checkbox"/> 4 <input type="checkbox"/> None of These
145.	933361145	IP Legislation, WIPO	2	<input type="checkbox"/> 1 <input checked="" type="checkbox"/> 2 <input type="checkbox"/> 3 <input type="checkbox"/> 4 <input type="checkbox"/> None of These
146.	933361146	IP Legislation, WIPO	1	<input checked="" type="checkbox"/> 1 <input type="checkbox"/> 2 <input type="checkbox"/> 3 <input type="checkbox"/> 4 <input type="checkbox"/> None of These
147.	933361147	IP Legislation, WIPO	1	<input checked="" type="checkbox"/> 1 <input type="checkbox"/> 2 <input type="checkbox"/> 3 <input type="checkbox"/> 4 <input type="checkbox"/> None of These
148.	933361148	IP Legislation, WIPO	4	<input type="checkbox"/> 1 <input type="checkbox"/> 2 <input type="checkbox"/> 3 <input checked="" type="checkbox"/> 4 <input type="checkbox"/> None of These
149.	933361149	IP Legislation, WIPO	1	<input checked="" type="checkbox"/> 1 <input type="checkbox"/> 2 <input type="checkbox"/> 3 <input type="checkbox"/> 4 <input type="checkbox"/> None of These
150.	933361150	IP Legislation, WIPO	3	<input type="checkbox"/> 1 <input type="checkbox"/> 2 <input checked="" type="checkbox"/> 3 <input type="checkbox"/> 4 <input type="checkbox"/> None of These

Claimed Answer Key List Upload Document:

Choose File

 No file chosen

In case the Candidates want to submit documents in supports of challenge of answer key, the should uploads the PDF file with Maximum size of 1 MB.