



# Teachingninja.in



**Latest Govt Job updates**



**Private Job updates**



**Free Mock tests available**

**Visit - [teachingninja.in](https://teachingninja.in)**



Teachingninja.in

# **CRPF Constable**

**Memory Based Paper  
(Technical & Tradesmen)  
03 Jul, 2023**



## 125 Questions

---

**Que. 1** Select the number from among the given options that can replace the question mark (?) in the following series.

34, 102, 612, 5508, ?

1. 64046
2. 68098
3. 66096
4. 68026

Correct Option - 3

---

**Que. 2** Select the correct mirror image of the given figure when the mirror is placed at line MN as shown.



1.



2.



3.



4.



Correct Option - 3

---

**Que. 3** Which of the following numbers will replace the question mark (?) in the given series?

4, 9, 17, 30, 50, 81, 125, ?

1. 186
2. 166

- 3. 168
- 4. 163

Correct Option - 1

**Que. 4** If  $A + B$  means A is the sister of B;  $A - B$  means A is the brother of B;  $A \times B$  means A is the daughter of B, then  $D \times F + E$  means

- 1. E is the mother of D
- 2. D is the sister of E
- 3. E is the maternal uncle of D
- 4. F is the maternal uncle of E

Correct Option - 3

**Que. 5** Hardika is standing in a park facing the east direction. She turns 135 degrees anticlockwise. After that, she turns 90 degree anticlockwise. Then she finally turns 45 degrees anticlockwise. In which direction is she facing now?

- 1. South
- 2. West
- 3. North
- 4. Southwest

Correct Option - 1

**Que. 6** X was born on March 6, 1993. The same year Independence was celebrated on Friday. Find out the birth day of X?

- 1. Thursday
- 2. Saturday
- 3. Friday
- 4. Wednesday

Correct Option - 1

**Que. 7** Choose the correct water image of the given image from the following options.

EVAPORATE

- 1. EVAPORATE
- 2. EVAPORATE
- 3. EVAPORATE
- 4. EVAPORATE

Correct Option - 1

**Que. 8** A piece of paper is folded and punched as shown below in the question figures. From the given answer figures, indicate how it will appear when opened.



- 1.
- 2.
- 3.
- 4.

Correct Option - 2

**Que. 9** Select the option in which the given figure is embedded. (Rotation is NOT allowed)

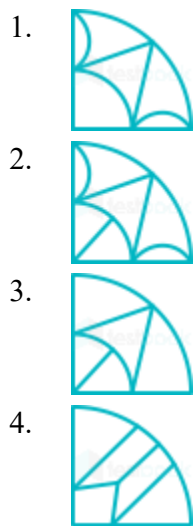


- 1.
- 2.
- 3.



Correct Option - 1

**Que. 10** Select the figure from the options that can replace the question mark (?) and complete the given pattern.



Correct Option - 2

**Que. 11** In the following question, except one word, all are alike in a certain way. Select the one which is different from others.

- 1. Ruby
- 2. Sapphire
- 3. Granite
- 4. Topaz

Correct Option - 3

**Que. 12** Select the option that is related to the fourth term in the same way as the first term is related to the second term and the fifth term is related to the sixth term.

$11 : 31 :: ? : 25 :: 14 : 40$

- 1. 8
- 2. 10

- 3. 7
- 4. 9

Correct Option - 4

**Que. 13** How many triangles are there in the given figure?



- 1. 17
- 2. 15
- 3. 16
- 4. 14

Correct Option - 2

**Que. 14** Select the correct combination of mathematical signs to replace the \* signs and balance the given equation.

$89 * 5 * 15 * 32 * 8 * 18$

- 1.  $\div, +, -, \times, =$
- 2.  $\times, +, \div, -, =$
- 3.  $+, -, \div, \times, =$
- 4.  $-, \times, +, \div, =$

Correct Option - 4

**Que. 15** A boy walks 17km towards East, turns right and walks 5km; turns left and walks 6km and reaches the destination. What is the distance travelled by the boy?

- 1. 28km
- 2. 32km
- 3. 30km
- 4. 25km

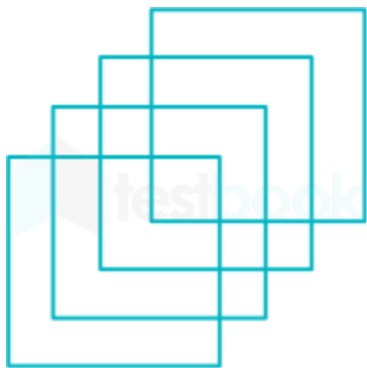
Correct Option - 1

**Que. 16** If PANT is coded as 51, then what will be the code for DOGS?

- 1. 49
- 2. 44
- 3. 52
- 4. 45

Correct Option - 4

**Que. 17** What is the maximum number of squares in this image?



- 1. 15
- 2. 12
- 3. 16
- 4. 9

Correct Option - 3

**Que. 18** Two different positions of the same dice are shown, the six faces of which are marked from A to F. Select the letter that will be on the face opposite to the one showing 'D'.



- 1. F
- 2. C
- 3. B
- 4. E

Correct Option - 1

**Que. 19** Which two signs should be interchanged to make the below equation mathematically correct?  
 $42 + 12 \div 24 \times 84 - 14 = 91$

- 1. + and  $\times$
- 2.  $\div$  and -
- 3. - and +
- 4.  $\times$  and  $\div$

Correct Option - 1

**Que. 20** A # B means 'A is the brother of B'  
A @ B means 'A is the sister of B'







A & B means 'A is the husband of B'  
A % B means 'A is the daughter of B'  
If W # Q @ T & Y @ M % K # L, then how is K related to T?

- 1. Wife's father
- 2. Wife's brother
- 3. Father
- 4. Brother

Correct Option - 1

**Que. 21** Select the Venn diagram that best illustrates the relationship between the following classes.  
Planet, Mars, Venus

- 1. 
- 2. 
- 3. 
- 4. 

Correct Option - 3

**Que. 22** If 'A # B' means A is the father of B,  
'A & B' means A is the brother of B,  
'A @ B' means A is the mother of B,  
then, which of the following is definitely true about C@ A # B & D?

- 1. C is mother of A and D.
- 2. D is daughter of A.
- 3. C is paternal grandmother of B and D.
- 4. D is granddaughter of C.

Correct Option - 3

**Que. 23** If  $\div$  means  $+$ ,  $+$  means  $-$ ,  $-$  means  $\times$ , and  $\times$  means  $\div$ , then which of the following equations is correct?

1.  $15 - 3 + 10 \times 5 \div 5 = 46$
2.  $15 - 3 + 10 \times 5 \div 5 = 50$
3.  $15 - 3 + 10 \times 5 \div 5 = 48$
4.  $15 - 3 + 10 \times 5 \div 5 = 55$

Correct Option - 3

**Que. 24** Four letter-clusters have been given, out of which three are alike in some manner and one is different. Select the letter-cluster that is different.

1. CEGI
2. HJMO
3. TVYA
4. PRUW

Correct Option - 1

**Que. 25** K is the sister of P, who is the husband of M. G is the sister-in-law of M. A is the son of M. R is the father-in-law of M. S is the mother of K. How is G related to A?

1. Aunt
2. Uncle
3. Father
4. Mother

Correct Option - 1

**Que. 26** Which of the following folk dance is associated with the state of West Bengal?

1. Rauf
2. Chhau
3. Ghoomar
4. Rasleela

Correct Option - 2

**Que. 27** The women of which tribe perform the traditional folk dance called Chakri?

1. Kaul
2. Kanjar
3. Gond
4. Bharia

Correct Option - 2

**Que. 28** Which state capital has been selected as 100<sup>th</sup> Smart City under the Smart Cities Mission ?

1. Guwahati
2. Dispur
3. Shillong
4. Agartala

Correct Option - 3

---

**Que. 29** Who has been named as a recipient of the prestigious Lokmanya Tilak National Award for 2021?

1. Dilip Shanghvi
2. Cyrus Poonawalla
3. Uday Kotak
4. Radhakishan Damani

Correct Option - 2

---

**Que. 30** Besides Amoeba, there is an example of a single cell that can change its shape

1. Ostrich egg cell
2. White Blood Cell
3. Nerve Cell
4. Muscle cell

Correct Option - 2

---

**Que. 31** Which one of the following matches is not a correct way of food preservation?

1. Raw Mango - Pickle
2. Potato - Chips
3. Milk - Paneer
4. Apple - Jam

Correct Option - 3

---

**Que. 32** Under the leadership of Khan Abdul Ghaffar Khan, the Pathans founded the Khudai Khidmatgar Samaj, popularly known as \_\_\_\_\_.

1. Neeli Kurti
2. Peeli Kurti
3. Lal Kurti (Red Shirt)
4. Safed Kurti

Correct Option - 3

---

Who among the following did Babur defeat in the year 1528 at Chanderi?

**Que. 33**

1. Muhammad Lodhi
2. Ibrahim Lodi
3. Bappa Rawal
4. Medini Rai

Correct Option - 4

---

**Que. 34**

Who introduced the post of Diwan-e-Bandagan?

1. Firoz Shah Tughlaq
2. Mohammad Bin Tughlaq
3. Sikandar Lodi
4. Khizr Khan

Correct Option - 1

---

**Que. 35**

The Akali movement was associated with \_\_\_\_\_.

1. Young Bengal Movement
2. Prarthana Samaj
3. Theosophical Movement
4. Sikh Reform Movement

Correct Option - 4

---

**Que. 36**

Delhi Sultanate was established in which of the following years?

1. 1206
2. 1290
3. 1453
4. 1342

Correct Option - 1

---

**Que. 37**

Hoysaleswara Temple is located in which state?

1. Tamil Nadu
2. Kerala
3. Karnataka
4. Telangana

Correct Option - 3

---

**Que. 38**

Who has won the prestigious 2021 World Food Prize?

1. Dr Farah Pandith

2. Dr Shakuntala Haraksingh Thilsted
3. Sendhil Mullainathan
4. Radhika Govindrajan

Correct Option - 2

---

**Que. 39** In which of the following states the saddle peak is situated?

1. West Bengal
2. Andaman and Nicobar
3. Goa
4. Coconut Island

Correct Option - 2

---

**Que. 40** In which part of India are the Patkai Bum hills located?

1. Southern part of India
2. Northern part of India
3. Eastern part of India
4. Western part of India

Correct Option - 3

---

**Que. 41** Who wrote the book 'Poverty and Un-British Rule in India'?

1. Madam Cama
2. Jawaharlal Nehru
3. Adam Smith
4. Dadabhai Naoroji

Correct Option - 4

---

**Que. 42** Which part of the Constitution is called the "Magna Carta of the Indian Constitution"?

1. Part 3
2. Part 4
3. Part 2
4. Part 5

Correct Option - 1

---

**Que. 43** Which of the following is not in the infrastructure sector.

1. Power generation
2. Construction of roads
3. Food production

4. Expansion of airports

Correct Option - 3

---

**Que. 44** Who was the founder of Brahma Samaj?

1. Raja Ram Mohan Roy
2. Swami Vivekananda
3. Dayananda Saraswati
4. Jyoti Ba Phule

Correct Option - 1

---

**Que. 45** Shinzo Abe was famous leader of \_\_\_\_\_.

1. Japan
2. South Korea
3. North Korea
4. China

Correct Option - 1

---

**Que. 46** The entire area containing the Himadri, the Himachal, and the Siwaliks is broadly known as

1. Dehra Dun
2. Great Himalayas
3. Lesser Himalayas
4. Kumaun Himalayas

Correct Option - 4

---

**Que. 47** In a typical cell, the organelle Golgi bodies are found in the \_\_\_\_\_

1. Nucleus
2. Cytoplasm
3. Centrosome
4. Mitochondria

Correct Option - 2

---

**Que. 48** Which of the following cities is a part of Golden Quadrilateral?

1. Ahmadabad
2. Chennai
3. Raipur
4. Hyderabad

Correct Option - 2

---

**Que. 49** The State having lowest literacy rate according to census 2011 is

1. Telangana
2. Bihar
3. Rajasthan
4. Arunachal Pradesh

Correct Option - 2

---

**Que. 50** Ramanujan Prize for young mathematicians 2021 has been awarded to-

1. Narendra Karmakar
2. Keith Devlin
3. Ian Stewart
4. Neena Gupta

Correct Option - 4

---

**Que. 51** Which of the following numbers is divisible by both 4 and 9?

1. 2368
2. 2736
3. 3954
4. 3814

Correct Option - 2

---

**Que. 52** Find the average.

18, 24, 28, 32, 36 & 42

1. 26
2. 34
3. 20
4. 30

Correct Option - 4

---

**Que. 53** Train A running at 81 km/h takes 72 sec to overtake train B, when both the trains are running in the same direction, but it takes 36 sec to cross each other if the trains are running in the opposite direction. If the length of train B is 600 metres, then find the length of train A. (in metres)

1. 600
2. 480
3. 590

4. 900

Correct Option - 2

---

**Que. 54** An article is sold at a profit of 15%. If both the cost price and the selling price of the article are reduced by Rs.140 each, then the profit percentage becomes 19.2%. The cost price of the article is:

1. Rs.560
2. Rs.720
3. Rs.680
4. Rs.640

Correct Option - 4

---

**Que. 55** There were two candidates in an election, 10% of voters did not cast their vote and 48 votes were found invalid. The winning candidate got 53% of the total votes and won by 304 votes. Find the total number of voters enrolled.

1. 1200
2. 1400
3. 1800
4. 1600

Correct Option - 4

---

**Que. 56** If the perimeter of the base of a cone is 220 cm and its height is 2 more than twice the radius of a cone, then the volume of the cone is:

1. 79500 cm<sup>3</sup>
2. 87900 cm<sup>3</sup>
3. 92400 cm<sup>3</sup>
4. 68800 cm<sup>3</sup>

Correct Option - 3

---

**Que. 57** The single discount which is equal to successive discounts of 20%, 25%, and 10% is :

1. 40%
2. 44%
3. 54%
4. 46%

Correct Option - 4

---

**Que. 58** Pipes A and B can fill a tank in 12 hours and 16 hours respectively and pipe C can empty the full tank in 24 hours. All three pipes are opened together, but after 4 hours pipe B is closed. In how many hours, the empty tank will be completely filled?



1. 32
2. 28
3. 18
4. 14

Correct Option - 3

---

**Que. 59** A 1800 metres long train crosses a man walking in opposite direction in 10 seconds. If the speed of train is 8 times to the speed of man, then what is the speed of train?

1. 576 km/hr
2. 640 km/hr
3. 596 km/hr
4. 570 km/hr

Correct Option - 1

---

**Que. 60** What is the value of  $\frac{15 \div 5 \times 3 - 12 \times 12 \div 6 + 15 \div 5 \times 6}{18 \div 3 \times 5 - 12 \div 6 \times 5 + 18 \div 9 \times 5}$  ?

1. 1/20
2. 1/5
3. 1/15
4. 1/10

Correct Option - 4

---

**Que. 61** 10 cylindrical pillars of a building have to be painted. The diameter of each pillar is 70 cm and the height is 4 m. What is the cost of painting at the rate of Rs 5 per square metre?

1. Rs. 400
2. Rs. 440
3. Rs. 480
4. Rs. 500

Correct Option - 2

---

**Que. 62** The curved surface area of a right circular cylinder of base radius 3 cm is  $94.2 \text{ cm}^2$ . The volume of the cylinder is: (Take  $\pi = 3.14$ )

1.  $141.30 \text{ cm}^3$
2.  $127.17 \text{ cm}^3$
3.  $113.04 \text{ cm}^3$
4.  $169.56 \text{ cm}^3$

Correct Option - 1



**Que. 63** A can do a piece of work in 72 days. He works at it for 9 days and then B alone finishes the remaining work in 42 days. In how many days will A and B working together, finish the same work?

1.  $28\frac{4}{5}$
2.  $27\frac{3}{5}$
3.  $26\frac{2}{5}$
4.  $25\frac{1}{5}$

Correct Option - 1

**Que. 64** Two numbers are in the ratio of 5 : 7. If 6 be added to each, the ratio becomes 3 : 4. Find the numbers.

1. 30, 42
2. 55, 88
3. 10, 16
4. 25, 40

Correct Option - 1

**Que. 65** The ratio of the number of coins of 25 paise, 50 paise, Rs. 2 and Rs. 5 is 5 : 4 : 3 : 1, respectively. If the total amount of the coins is Rs. 285, then the difference between the number of 25 paise and Rs. 5 coins is:

1. 80
2. 30
3. 40
4. 60

Correct Option - 1

**Que. 66** The value of  $0.00126 \times 0.04 \times 0.070 \div (0.12 \times 0.0048)$  is-

1. 0.2541
2. 0.02546
3. 0.1562
4. 0.006125

Correct Option - 4

**Que. 67** If an amount of Rs. 6,000.00 was taken as loan @12% for three years. What would be the total interest on that

1. Rs. 3160
2. Rs. 2160
3. Rs. 3060
4. Rs. 3360

Correct Option - 2

---

**Que. 68** Find the area of the triangle whose sides are 8 cm, 15 cm, 17 cm.

1. 58 cm<sup>2</sup>
2. 60 cm<sup>2</sup>
3. 63 cm<sup>2</sup>
4. 50 cm<sup>2</sup>

Correct Option - 2

---

**Que. 69** The average temperature on Wednesday, Thursday and Friday was 20°. The average temperature on Thursday, Friday and Saturday was 24°. If the temperature on Saturday was 27°, what the temperature on Wednesday?

1. 15°
2. 21°
3. 27°
4. 30°

Correct Option - 1

---

**Que. 70** The ratio of income of Jitendra, and Narendra is 4 : 7 and the ratio of their expenditure is 6 : 5 respectively. If Jitendra saves Rs. 400 out of Rs. 2,800 income, then find the savings of Narendra.

1. Rs. 2,900
2. Rs. 2,000
3. Rs. 4,900
4. Rs. 3,900

Correct Option - 1

---

**Que. 71** A box is in the form of a cube. If its outer edge is 6m long, then find the cost of painting of the outer surface area of the box at the rate of Rs. 5 per m<sup>2</sup>.

1. Rs. 1050
2. Rs. 895
3. Rs. 989
4. Rs. 1080

Correct Option - 4

---

**Que. 72** The difference between simple and compound interest on certain principal amount, for 2 years at the rate of 5% per annum, is ₹11.25. Find the principal amount.

1. ₹4,500

2. ₹5,500
3. ₹4,000
4. ₹4,300

Correct Option - 1

---

**Que. 73** The average age of Abhay, his wife and their child 6 years ago was 42 years and that of his wife and their child 8 years ago was 30 years, Find the present age of Abhay.

1. 68 years
2. 63 years
3. 64 years
4. 66 years

Correct Option - 1

---

**Que. 74** If the surface area of a sphere is  $20 \text{ cm}^2$ , then what will be the total surface area of a hemisphere of same radius?

1.  $20 \text{ cm}^2$
2.  $15 \text{ cm}^2$
3.  $40 \text{ cm}^2$
4.  $10 \text{ cm}^2$

Correct Option - 2

---

**Que. 75** What is the sum of first 30 natural numbers?

1. 500
2. 496
3. 475
4. 465

Correct Option - 4

---

**Que. 76** DIRECTIONS: A sentence with an underlined idiomatic expression is given. What is the meaning of the idiomatic expression 'To take the law into one's hand 'in the sentence given below?

Her mother took the law into her own hands when she heard that her child had been abused.

1. to do something illegal in order to punish someone
2. None of the above
3. to wear the clothes of the judge
4. to lift something heavy

Correct Option - 1

**Que. 77** **Direction:** The sentence is divided into four parts. Find out which part has an error and mark it as your answer. If there is no error, mark 'No error' as your answer.

As I need an air (A) / in this stuffy room, (B) / please open that window. (C) / No error (D)

1. A
2. B
3. C
4. D

Correct Option - 1

---

**Que. 78** Choose the **correct spelling** of the underlined word. If the given spelling is correct, choose 'No correction'.

This rule is necesary to maintain discipline.

1. necessary
2. nessery
3. necessary
4. No correction

Correct Option - 3

---

**Que. 79** **Fill in the blank with the appropriate option:**

I first saw the Himalayas \_\_\_\_\_ year ago.

1. an
2. the
3. a
4. None of these

Correct Option - 3

---

**Que. 80** **Out of the four alternatives, choose the one which can be substituted for the given words/sentence.**

The science of the causes and effects of diseases.

1. Cardiology
2. Alienation
3. Anthropology
4. Pathology

Correct Option - 4

---

**Que. 81** **Select the most appropriate meaning of the given idiom.**

Red letter day

1. Memorable day
2. Rose day
3. Holiday
4. Birthday

Correct Option - 1

---

**Que. 82** Choose the incorrectly spelt word.

1. Contradiction
2. Abhorrent
3. Condensing
4. Hereditary

Correct Option - 3

---

**Que. 83** Select the most appropriate pronoun to fill in the blank.

The teacher left an everlasting impact on \_\_\_\_\_ students.

1. himself
2. its
3. mine
4. his

Correct Option - 4

---

**Que. 84** Choose the word which is nearly opposite in meaning to the given word:

Haughtiness

1. unskilled
2. affability
3. adduce
4. abject

Correct Option - 2

---

**Que. 85** Select the most appropriate idiom to fill in the blank.

When he heard that he had got admission in IIT, he was \_\_\_\_\_

1. on the ball
2. on the ropes
3. on top of the world
4. on the hot seat

Correct Option - 3

---



**Que. 86** Select the most appropriate synonym of the given word.

Peculiar

1. Unusual
2. Customary
3. Perplexed
4. Proven

Correct Option - 1

---

**Que. 87** Select the most appropriate word to fill in the blank.

1950 is \_\_\_\_ year in which India became a republic.

1. the
2. a
3. one
4. an

Correct Option - 1

---

**Que. 88** **Direction: In the following sentence, one part of the sentence has an error. Find out that particular part and select the appropriate option. If there is no error in the sentence, choose option 4 i.e. 'No error.'**

You will finish/ (A) your report by/ (B) this time next week./ (C) No error./ (D)

1. A
2. B
3. C
4. D

Correct Option - 1

---

**Que. 89** Select the one which is opposite in meaning of the given word.

Salient

1. Negligible
2. Prominent
3. Striking
4. Clear

Correct Option - 1

---

**Que. 90** Fill in the blanks with grammatically correct option.

When Lulu asked to see \_\_\_\_ wedding pictures, she didn't expect Annie to put on \_\_\_\_ twelve-hour slide show.

1. an, a
2. the, the
3. the, a
4. a, a

Correct Option - 3

---

**Que. 91** Select the most appropriate meaning of the given idiom.

At one's elbow

1. Next to someone
2. Far away
3. Strong grip
4. Strong bond

Correct Option - 1

---

**Que. 92** Select the most appropriate synonym of the given word.

Gourmet

1. Indifferent
2. Detached
3. Epicure
4. Non-indulgent

Correct Option - 3

---

**Que. 93** Direction: Identify the segment in the sentence which contains a grammatical error. If there is no error, then select the option 'No error'.

All of us were a little nervous when we came into this room today.

1. when we came into this room today
2. All of us were
3. No error
4. a little nervous when

Correct Option - 3

---

**Que. 94** Give antonym for the following word:

Ascend

1. Descend
2. Departure
3. Come up
4. Reach



Correct Option - 1

---

**Que. 95** Choose the most suitable auxiliary or modal verb out of the given alternatives.

In the Middle Ages, people \_\_\_\_\_ travel by plane.

1. could
2. had to
3. can't
4. couldn't

Correct Option - 4

---

**Que. 96** Read the given passage and answer the following questions -

In the rapidly changing world of technology, social media has transformed from being a mere platform for sharing personal moments into a powerful tool for information dissemination and community building. The impact of social media on society cannot be understated. As of 2023, it is estimated that over 3.8 billion people worldwide are active social media users. This is about 49% of the global population, showing how deeply intertwined our lives have become with these platforms.

The reach and ease of use of social media have democratized information access like never before. Today, anyone with an internet connection can access a wealth of knowledge, contribute to discussions, and voice their opinions. In many ways, social media has levelled the playing field, reducing the information gap between different parts of the world.

However, while social media's potential for positive impact is vast, it is also prone to misuse. The spread of misinformation, cyberbullying, privacy intrusion, and addictive behaviour are significant concerns. For instance, the unchecked propagation of fake news can lead to dangerous real-world consequences, creating a societal divide and fuelling tensions.

Despite these challenges, the potential benefits of social media, when used responsibly, are enormous. From fostering global connections to facilitating social movements and creating opportunities for e-commerce, social media has a profound impact on our everyday lives and societal dynamics.

What is one of the significant concerns related to the misuse of social media?

1. Encouraging healthy discussions
2. Facilitating social movements
3. Propagation of fake news
4. Creating global connections

Correct Option - 3

---

**Que. 97** Which of the following statements is incorrect based on the passage?

1. Social media has transformed into a powerful tool for information dissemination and community building.
2. The unchecked propagation of fake news on social media can lead to dangerous real-world consequences.
3. The misuse of social media only has minor concerns.
4. Social media can facilitate social movements when used responsibly.



Correct Option - 3

---

**Que. 98** What is one of the potential benefits of using social media responsibly?

1. Spreading misinformation
2. Fuelling societal tensions
3. Facilitating social movements
4. Intruding on privacy

Correct Option - 3

---

**Que. 99** What is a synonym for the word 'unchecked' as used in the passage?

1. Reviewed
2. Uncontrolled
3. Disapproved
4. Endorsed

Correct Option - 2

---

**Que. 100** What proportion of the global population are estimated to be active social media users in 2023?

1. 25%
2. 35%
3. 49%
4. 75%

Correct Option - 3

---

**Que. 101** शब्द 'हर्ष' के चार विलोम दिए गए हैं। सही विलोम शब्द का चयन कीजिये।

1. खेद
2. वेदना
3. दुःख
4. विषाद

Correct Option - 4

---

**Que. 102** अमर का विलोम शब्द है

1. मर्त्य
2. मृत्यु
3. अजर
4. उत्तल

Correct Option - 1

**Que. 103** निम्न में सांप का पर्यायवाची शब्द है।

1. महाकाय
2. विषधर
3. धरणी
4. क्षीर

Correct Option - 2

**Que. 104** दिए गए शब्द के समानार्थी शब्द का चयन कीजिए।  
आँख

1. अम्बु
2. दृग
3. वासव
4. दनुज

Correct Option - 2

**Que. 105** निम्नलिखित प्रश्न में, चार विकल्पों में से, उस विकल्प का चयन करें जो दिए गए शब्द का सही अर्थ वाला शब्द है।  
वसन

1. कपड़ा
2. चंचल
3. धरती
4. कष्ट

Correct Option - 1

**Que. 106** 'घड़ियां गिनना' मुहावरे का अर्थ है-

1. खूब याद रखना
2. घड़ियां गिनकर रखना
3. गिनती करना
4. बेचैनी से प्रतीक्षा करना

Correct Option - 4

**Que. 107** चिकना घड़ा होना – मुहावरे का अर्थ है:

1. शर्म आ जाना

2. बेशर्म होना
3. सुंदर होना
4. फिसल भरा होना

Correct Option - 2

---

**Que. 108** हमें व्यायाम \_\_\_\_\_ चाहिए । रिक्त स्थान के लिए उपयुक्त शब्द कौनसा होगा?

1. दौडना
2. करना
3. भागना
4. साधना

Correct Option - 2

---

**Que. 109** 'किन्हीं' सर्वनाम है-

1. सम्बन्धवाचक सर्वनाम
2. अनिश्चयवाचक सर्वनाम
3. निश्चयवाचक सर्वनाम
4. प्रश्नवाचक सर्वनाम

Correct Option - 2

---

**Que. 110** 'थोड़ा' में किस प्रकार का विशेषण है?

1. परिमाणवाचक विशेषण
2. संख्यावाचक विशेषण
3. गुणवाचक विशेषण
4. सर्वनामिक विशेषण

Correct Option - 1

---

**Que. 111** निपुण का अर्थ छाँटिए-

1. कुशल
2. सकुशल
3. अकुशल
4. सक्षम

Correct Option - 1

---

**Que. 112** 'नयन' में संधि है:

1. अयादि स्वर संधि
2. वृद्धि स्वर संधि
3. व्यंजन संधि
4. विसर्ग संधि

Correct Option - 1

---

**Que. 113** मनोबल का संधि विच्छेद क्या होगा?

1. मनः + बल
2. मन + बल
3. मनो + बल
4. मनो + उबल

Correct Option - 1

---

**Que. 114** 'पीताम्बर' में कौन-सा समास है?

1. तत्पुरुष (द्विगु)
2. द्वन्द्व
3. बहुव्रीहि
4. अव्ययीभाव

Correct Option - 3

---

**Que. 115** 'वज्राहत' शब्द में कौन सा समास है?

1. कर्मधारय समास
2. अव्ययीभाव समास
3. बहुव्रीहि समास
4. तत्पुरुष समास

Correct Option - 4

---

**Que. 116** निम्न में शुद्ध वर्तनी पहचानिए

1. परिणती
2. जलान्जली
3. वाल्मीकि
4. तिथी

Correct Option - 3

**Que. 117** निम्न में से एक वाक्य गलत है, गलत वाक्य का चयन कीजिए

1. तुम चलो मैं आता हूँ
2. उसने चारो-पाँचों जलेबी खाई
3. दूध में क्या पड़ गया
4. मैं रातभर जागता रहा

Correct Option - 2

**Que. 118** निर्देश: दिए गये प्रश्न में चार-चार वाक्य दिए गये हैं, इनमें से एक वाक्य सही है। सही वाक्य चुनिए।

1. कविता की भाषा सरल, सहज और सुबोधपूर्ण है।
2. कविता की भाषा सरलतापूर्ण, सहज और सुबोधक है।
3. कविता की भाषा सरल, सहजपूर्वक और सुबोधपूर्ण है।
4. कविता की भाषा सरल, सहज और सुबोध है।

Correct Option - 4

**Que. 119** 'कपिल आम खाता है।' वाक्य में क्रिया है। -

1. पूर्वकालिक क्रिया
2. नामधातु क्रिया
3. अकर्मक क्रिया
4. सकर्मक क्रिया

Correct Option - 4

**Que. 120** "जादूगर" शब्द का लिंग बदलिए।

1. जादू
2. जादुनी
3. जादूगरनी
4. जादुरनी

Correct Option - 3

**Que. 121** एक गद्यांश दिया गया है। गद्यांश के आधार पर पाँच प्रश्न दिए गए हैं। गद्यांश को ध्यानपूर्वक पढ़ें तथा प्रत्येक प्रश्न में चार विकल्पों में से सही विकल्प चुने।

मानव-जीवन और उसके द्वारा गठित समाज संसार में सर्वोच्च है। इसी कारण साहित्य, कला, ज्ञान-विज्ञान, दर्शन, धर्म आदि स्थूल या सूक्ष्म संसार में जो कुछ भी है, वह सब जीवन और मानव-समाज के लिए ही है, यह एक निर्विवाद मान्यता है। उससे ऊपर या बाहर कुछ भी नहीं। मानव एक सामाजिक प्राणी है। वह व्यक्ति या समूह के स्तर पर जो कुछ भी सोचता, विचारता और भावना के स्तर पर संजोया करता है, वही सब लिखित या लिपिबद्ध होकर साहित्य कहलाता है। इस प्रकार कहा जा सकता है कि साहित्य वस्तुतः जीवन और समाज से भावसामग्री लेकर, अपने शरीर या स्वरूप का निर्माण कर फिर वह सब जीवन और समाज को ही अर्पित कर दिया करता है। लेन-देन की यह प्रक्रिया साहित्य और समाज के आपसी संबंधों को प्रायः

स्पष्ट कर देती है। जब से मानव ने सोचना-विचारना, पढ़ना-लिखना और अपने-आपको दूसरों पर प्रकट करना सीखा है, तभी से साहित्य-समाज में आदान-प्रदान की यह प्रक्रिया भी चल रही है और तब तक निरंतर चलती रहेगी, जब तक कि मनुष्यों में सोचने-विचारने आदि के ये गुण रहेंगे। इस दृष्टि से साहित्य और समाज का संबंध चिरंतन कहा जा सकता है। मानव सृष्टि का सर्वश्रेष्ठ प्राणी है और साहित्य उसकी महानतम उपलब्धि मानी गई है। उसमें उसका अपना ही भावाविल वैचारिक प्रतिबिंब संरक्षित रहा करता है। उसे पढ़-देखकर मानव-समाज अपने चेहरे पर लगे धब्बों का परिष्कार कर सकता है। इस प्रकार साहित्य और समाज में बिंब-प्रतिबिंब भाव या चोली-दामन का संबंध रेखांकित किया जा सकता है। मानव-समाज के लिए साहित्य हितकारी सिद्ध होता है।

साहित्य कैसी उपलब्धि मानी गयी है?

1. आदान-प्रदान
2. महानतम
3. भावसामग्री
4. लेन-देन

Correct Option - 2

---

**Que. 122** मानव क्या है?

1. चिरंतन
2. समाज
3. सामाजिक प्राणी
4. भावाविल वैचारिक

Correct Option - 3

---

**Que. 123** मानव की महानतम उपलब्धि क्या मानी गयी है?

1. समूह
2. सोच
3. साहित्य
4. संसार

Correct Option - 3

---

**Que. 124** उपर्युक्त गद्यांश का उपयुक्त शीर्षक क्या होगा?

1. भाव या चोली-दामन
2. मानव समाज
3. सूक्ष्म संसार
4. समाज और साहित्य

Correct Option - 4

**Que. 125** साहित्य और समाज के संबंध को क्या कहाँ जाता है?

1. प्रतिबिम्ब
2. चिंतन
3. परिष्कार
4. वैचारिक

Correct Option - 2



Teachingninja.in

