



# Teachingninja.in



**Latest Govt Job updates**



**Private Job updates**



**Free Mock tests available**

**Visit - [teachingninja.in](https://teachingninja.in)**



Teachingninja.in

# **CRPF Constable**

**Memory Based Paper  
(Technical & Tradesmen)  
05 Jul, 2023**



125 Questions

**Que. 1** A boy starts from point A and walks 2 km towards West; turns left and walks 9 km and turns another left and walks 2 km. He then walks 5 km towards North; turns left and walks 4 km; turns right and walks 4 km. He then finally walks 6 km after turning right and reaches B. How far is A from B?

- 1. 2 km
- 2. 10 km
- 3. 8 km
- 4. 6 km

Correct Option - 1

**Que. 2** P is daughter of V and mother of S. K is brother of S and son of A. How is K related to V?

- 1. Grandson
- 2. Son
- 3. Father
- 4. Grandfather

Correct Option - 1

**Que. 3** If a means '+', b means '×', c means '÷' and d means '-', then  $4a5b30c10d7 = ?$

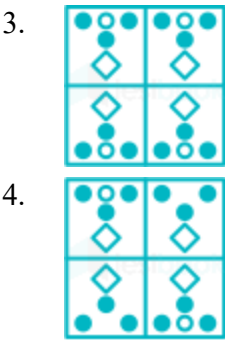
- 1. 54
- 2. 12
- 3. 20
- 4. 90

Correct Option - 2

**Que. 4** A paper is folded and cut as shown below. How will it appear when unfolded?



- 1.
- 2.



Correct Option - 3

**Que. 5** U \$ V means 'U is the sister of V'  
U @ V means 'U is the husband of V'  
U \* V means 'U is the son of V'  
U ÷ V means 'U is the mother of V'  
If O \$ P \* B @ F, how is O related to F?

- 1. Sister
- 2. Brother
- 3. Daughter
- 4. Daughter-in-law

Correct Option - 3

**Que. 6** In a certain code language, 'MADRAS' is written as '112' and 'JAMMU' is written as '82'. How will 'PUNJAB' be written in that language?

- 1. 109
- 2. 104
- 3. 112
- 4. 115

Correct Option - 2

**Que. 7** How many triangles are there in the following figure?



- 1. 8
- 2. 20
- 3. 16
- 4. 12

Correct Option - 3

**Que. 8** A man walks 8km towards West; takes a right turn and walks 6km. He then walks 5km towards the starting point and reached the destination. How far is he from the starting point?

- 1. 7km
- 2. 9km
- 3. 11km
- 4. 5km

Correct Option - 4

**Que. 9** Select from the selection of the correct shape, which is given the following picture:







- 1.
- 2.
- 3.
- 4.

Correct Option - 3

**Que. 10** Select the correct mirror image of the given figure when the mirror is placed at line MN as shown.



1. 
2. 
3. 
4. 

Correct Option - 1

**Que. 11** If  $A \times B$  means that A is the father of B,  $A - B$  means that A is the mother of B,  $A + B$  means that A is the brother of B then which of the following expression shows that Q is the son of P?

1.  $P \times Q + R$
2.  $Q \times P + R$
3.  $P + R \times Q$
4.  $P \times Q - R$

Correct Option - 1

**Que. 12** If 'BEAUTIFUL' is coded as 'ADZTSHETK' in some coding scheme. then how will 'HANDSOME' be coded in the same scheme?

1. GBMETOLD
2. GZMCRNLD
3. IZMCRPNF
4. IBMCTPNF

Correct Option - 2

**Que. 13** Which two signs should be interchanged to make the given equation correct?  
 $108 \div 2 * 10 + 70 - 10 = 480$

1. + and -
2.  $\div$  and \*
3. + and \*
4.  $\div$  and -

Correct Option - 1

**Que. 14** How many triangles are there in the given figure?



1. 21
2. 22
3. 19
4. 20

Correct Option - 4

**Que. 15** Pointing to a woman, Shankar said, "She is my mother's daughter". How is Shankar related to that woman?

1. Aunt
2. Brother
3. Son
4. Sister

Correct Option - 2

**Que. 16** In the following question, select the odd word pair from the given alternatives.

1. Nest – Bird
2. Palace – King
3. Cottage – Peasant
4. Lion – Den

Correct Option - 4

**Que. 17** Select the number from among the given options that can replace the question mark (?) in the following series.

135, 54, 27, 18, ?, 14

1. 16
2. 17
3. 14
4. 15

Correct Option - 4



**Que. 18** Parth goes jogging 40 metres towards east from his house. He turns left and jogs for 20 metres. He then turns right and jogs for 30 metres and finally, turns Southwards and jogs for another 20 metres and stops jogging. What is the shortest distance from his house to the point at which he stopped jogging?

- 1. 60 metres
- 2. 20 metres
- 3. 70 metres
- 4. 100 metres

Correct Option - 3

**Que. 19** Select the correct mirror image of the given combination when the mirror is placed at line 'AB' as shown.



- 1. k a 9 4 G h
- 2. k a 6 4 G h
- 3. k a 9 4 G h
- 4. k a 9 4 G h

Correct Option - 4

**Que. 20** Looking at a picture of a girl Nidhi said, “She is the daughter of my mother’s only daughter in law.” How is Nidhi related to the girl in the picture?





- 1. Husband’s brother’s wife
- 2. Daughter
- 3. Mother
- 4. Father’s sister

Correct Option - 4

**Que. 21** The sequence of folding a piece of paper and the manner in which the folded paper has been cut is shown below. Choose a figure which would most closely resemble the unfolded form of the paper.






1. 
2. 
3. 
4. 

Correct Option - 1

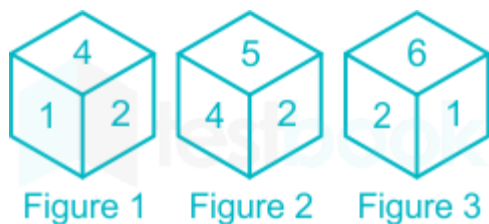
**Que. 22** Identify the number of rhombus in the following figure.



1. 15
2. 16
3. 14
4. 17

Correct Option - 4

**Que. 23** Three different positions of the same dice are shown (Figures 1 - 3). Find the number on the face opposite to the face having '3'.



1. 6
2. 2
3. 1
4. 5

Correct Option - 2

---

**Que. 24** Sachin is the only son of Maya. Dev is the son of Mayank. Devika is the daughter of Dev. Sachin is the brother of Devika. How is Maya related to Mayank?

1. Mother-in-law
2. Wife
3. Daughter
4. Daughter in law

Correct Option - 4

---

**Que. 25** Find the missing number:  
2, 7, \_\_\_\_, 23, 34, 47

1. 13
2. 14
3. 15
4. 12

Correct Option - 2

---

**Que. 26** In which country did Madam Cama hoist the Indian National Flag?

1. Germany
2. Spain
3. England
4. India

Correct Option - 1

---

**Que. 27** Which of the following organisation has developed the Arjun MBT Mk IA battle tank?

1. DRDO
2. HAL
3. ISRO
4. Bharat Electronics

Correct Option - 1

---

The right to move freely throughout the territory of India comes under which Article of the Indian Constitution?

**Que. 28**

1. Article 11
2. Article 13
3. Article 19
4. Article 22

Correct Option - 3

**Que. 29**

Padma Subrahmanyam is known for which classical dance form?

1. Bharatanatyam
2. Kathak
3. Kuchipudi
4. Mohiniyattam

Correct Option - 1

**Que. 30**

Bilaspur is the zonal headquarter of \_\_\_\_\_ Railway.

1. Eastern Railway
2. Central Railway
3. South Western Railway
4. South East Central Railway

Correct Option - 4

**Que. 31**

Which of the following is the most literate district in India as per Census 2011?

1. Kottayam
2. Serchhip
3. Champhai
4. Ernakulam

Correct Option - 2

**Que. 32**

Who among the following earned the sobriquet 'Bharat Kokila' from Mahatma Gandhi?

1. Sarojini Naidu
2. Annie Besant
3. Toru Dutt
4. Sucheta Kriplani

Correct Option - 1

**Que. 33**

Which of the following was the first "Satyagraha" movement under the leadership of Mahatma Gandhi?

1. Ahmedabad Satyagraha
2. Champaran Satyagraha
3. Salt Satyagraha Movement
4. Kheda Satyagraha

Correct Option - 2

---

**Que. 34** Which one of the following was added as a fundamental right through the Constitution (86th Amendment) Act, 2002?

1. To strive towards excellence in individual and collective activity
2. To provide opportunities for education to one's child between the age of 6 and 14 years
3. To work for the welfare of women and children
4. To promote peace and harmony

Correct Option - 2

---

**Que. 35** Which of the following is not related to Human Development Index (HDI)?

1. Education
2. Per capita income
3. Life expectancy
4. Birth rate

Correct Option - 4

---

**Que. 36** The food required for body growth is

1. Fat containing
2. Protein containing
3. Carbohydrate containing
4. Fibrous

Correct Option - 2

---

**Que. 37** Which is the largest Buddhist stupa located in India?

1. Kesaria Stupa, Bihar
2. Dhamek Stupa, Sarnath
3. Sanchi Stupa, Madhya Pradesh
4. Shanti Stupa, Leh

Correct Option - 1

---

**Que. 38** Which of the following terms is associated with the architecture of a Buddhist Stupa?

1. Mandapam



2. Gopuram
3. Harmika
4. Garbhagriha

Correct Option - 3

---

**Que. 39** Nishagandhi Nritya Utsav is celebrated in which state of India?

1. Kerala
2. Tamil Nadu
3. Telangana
4. Karnataka

Correct Option - 1

---

**Que. 40** Which of the following rivers flows through the Thar desert?

1. Luni
2. Tapi
3. Mahi
4. Wainganga

Correct Option - 1

---

**Que. 41** The state which receives maximum rainfall due to North-East monsoon is:

1. Assam
2. West Bengal
3. Tamil Nadu
4. Odisha

Correct Option - 3

---

**Que. 42** Who was the founder of 'Arya Samaj'?

1. Raja Ram Mohan Roy
2. Swami Vivekanand
3. Swami Dayanand Saraswati
4. Raja Radhakant Dev

Correct Option - 3

---

**Que. 43** Who among the following Mughal rulers introduced the Mansabdari system that became the basis of Mughal military organisation and civil administration?

1. Aurangzeb
2. Babur

3. Jehangir
4. Akbar

Correct Option - 4

---

**Que. 44** In which of the following states is Kardang Monastery situated?

1. Sikkim
2. Himachal Pradesh
3. Karnataka
4. West Bengal

Correct Option - 2

---

**Que. 45** Which of the following cities is situated on the banks of river Saryu ?

1. Hyderabad
2. Ayodhya
3. Jaipur
4. Ahmedabad

Correct Option - 2

---

**Que. 46** Twenty five percent of the land revenue collected by Marathas in the Deccan was called \_\_\_\_\_

1. Bhoga
2. Sardeshmukhi
3. Chauth
4. Bhaga

Correct Option - 3

---

**Que. 47** Which of the following two rulers fought the battle near Kannauj on 17th May, 1540?

1. Humayun and Sultan Mohammad Nuhani
2. Shershah and Humayun
3. Shershah and Mirza Kamran
4. Mohammad Shah and Humayun

Correct Option - 2

---

**Que. 48** Who founded the Theosophical Society?

1. C. W. Leadbeater
2. Jiddhu Krishnamurti
3. Mrs. Annie Besant
4. Madame Blavatsky and Col. Olcott

Correct Option - 4

---

**Que. 49** In February 2022, which of the following has installed and commissioned Param Pravega, one of the most powerful supercomputers in the country?

1. IIT Delhi
2. IIT Bombay
3. IISc Bangalore
4. NIT Durgapur

Correct Option - 3

---

**Que. 50** Which of the following State is **not** a part of the massive rural public works scheme - Garib Kalyan Rojgar Abhiyaan?

1. Bihar
2. Andhra Pradesh
3. Uttar Pradesh
4. Rajasthan

Correct Option - 2

---

**Que. 51** The ratio of age of a father to that of his son is 5 : 2. If the product of their ages in years is 1000, then the father's age (in years) after 10 years will be :

1. 50
2. 60
3. 45
4. 55

Correct Option - 2

---

**Que. 52** A thief started running at a speed of 12 m/s, after running for 10 sec a policeman started running to catch the thief in the same direction at a speed of 14.5 m/s. What is the time taken by the policeman to catch the thief?

1. 36 sec
2. 30 sec
3. 44 sec
4. 48 sec

Correct Option - 4

---

**Que. 53** The value of  $25 + 5 \text{ of } [12 + 3 \{5 - 2(7 - 3) + 3\} - 18] \div 3$  is:

1. 10
2. 20

3. 25
4. 15

Correct Option - 4

---

**Que. 54** How many spheres of radius 5 cm can be made by melting a bigger sphere of diameter 50 cm?

1. 250
2. 100
3. 125
4. 150

Correct Option - 3

---

**Que. 55** If C.P is Rs. 10,000 and S.P is Rs. 15,000. Find the profit percent?

1. 40%
2. 60%
3. 50%
4. 30%

Correct Option - 3

---

**Que. 56** In an election, two candidates participated. 20% votes declare invalid and the winner gets 70% of the valid votes and wins by 9600 votes. Find the number of voters.

1. 35000
2. 30000
3. 31000
4. 28000

Correct Option - 2

---

**Que. 57** If sum of money becomes  $\frac{7}{4}$  of itself in 3 years at certain rate of simple interest then find rate per annum

1. 22% p.a
2. 25% p.a
3. 24% p.a
4. 20% p.a

Correct Option - 2

---

**Que. 58** A can complete a work in 10 days. B can complete the same work in 15 days. If B starts the work and A joins him after 5 days, then in how many days will the work be completed ?

1. 8



2. 9
3. 4
4. 5

Correct Option - 2

---

**Que. 59** If the area of an equilateral triangle is,  $\frac{\sqrt{3}}{2} 84.5 \text{ cm}^2$ , then each side of the length is:

1. 11 cm
2. 10 cm
3. 12 cm
4. 13 cm

Correct Option - 4

---

**Que. 60** If marks of five students are 55, 60, 45, 53 & 57 respectively. The average marks of all the students is?

1. 57
2. 54
3. 56
4. 55

Correct Option - 2

---

**Que. 61** The average of five consecutive odd numbers is 7. Find the difference between the maximum and minimum numbers.

1. 9
2. 8
3. 7
4. 6

Correct Option - 2

---

**Que. 62** 30% of CP = 40% of SP. Find the profit or loss %?

1. 25% loss
2. 25% profit
3. 30% loss
4. 30% profit

Correct Option - 1

---

**Que. 63** A boat can travel with a speed of 11 km/hr in still water. If the speed of the stream is 7 km/hr, find the time taken by the boat to go 108 km downstream.

1. 1 hours

2. 2 hours
3. 4 hours
4. 6 hours

Correct Option - 4

---

**Que. 64** If  $(a + b + c) : d = 8 : 1$ ,  $(b + c + d) : a = 9 : 1$  and,  $(c + d + a) : b = 4 : 1$  then find  $a : b : c : d$ ?

1.  $9 : 18 : 10 : 10$
2.  $9 : 18 : 53 : 10$
3.  $7 : 5 : 9 : 6$
4.  $4 : 6 : 5 : 7$

Correct Option - 2

---

**Que. 65** A shopkeeper gives two pens free at the purchase of 10 pens. He gives 20% discount too and makes 20% profit. What is the ratio between the cost price and the marked price?

1.  $4 : 9$
2.  $5 : 9$
3.  $2 : 3$
4.  $4 : 5$

Correct Option - 2

---

**Que. 66** Find the number which is divisible by 7?

1. 519
2. 983
3. 568
4. 364

Correct Option - 4

---

**Que. 67** Evaluate:  $18.5 \times 3 - 12 \div 4 - 2 \times 10.5 + 5 \times 3$

1. 46.5
2. 22
3. 23.5
4. 18

Correct Option - 1

---

**Que. 68** What is the simplified value of  $(0.00243)^{(0.2)}$

1. 0.3
2. 0.03

3. 0.003
4. 0.0003

Correct Option - 1

---

**Que. 69** The monthly expenditure of a person is 40% more than his monthly savings. If his monthly income increases by 40% and monthly expenditure increases by 60%, then he saves Rs. 2,070 more in a month. What is his initial monthly expenditure (in Rs.)?

1. 20,250
2. 22,425
3. 24,150
4. 19,320

Correct Option - 3

---

**Que. 70** What is the change in the curved surface area of a cylinder when we double the radius and the height is halved?

1. Four times
2. Tripled
3. Doubled
4. No change

Correct Option - 4

---

**Que. 71** A hemispherical bowl of internal radius 18 cm is full of liquid. This liquid is to be filled in cylindrical bottles each of radius 3 cm and height 6 cm. How many bottles are required to empty the bowl?

1. 72
2. 70
3. 68
4. 66

Correct Option - 1

---

**Que. 72** Approximately 33% of marks were required to pass an examination. A candidate who scores 179 marks, fails by 21 marks. What are the total marks for the examination?

1. 700
2. 650
3. 600
4. 550

Correct Option - 3

---

**Que. 73** The length of rectangular sheet of paper is 24 cm more than the breadth and perimeter of the rectangular sheet is 128 cm. Find the length of the rectangular sheet.

1. 20 cm
2. 44 cm
3. 48 cm
4. 34 cm

Correct Option - 2

---

**Que. 74** In how many years will the simple interest on a sum of money be equal to the principle at rate of  $12\frac{2}{4}\%$  p.a.?

1. 8 years
2. 5 years
3. 7 years
4. 6 years

Correct Option - 1

---

**Que. 75** Find the mean proportional of 0.75 and 3?

1. 1.25
2. 1.5
3. 1
4. 2

Correct Option - 2

---

**Que. 76** Select the correctly spelt word.

1. Commemorate
2. Comemorate
3. Comemmorate
4. Commemorate

Correct Option - 4

---

**Que. 77** Select the option that can be used as a one-word substitute for the given group of words.  
Soldiers on horses

1. Combats
2. Gallantry
3. Chivalry
4. Cavalry

Correct Option - 4

---

**Que. 78** Select the option that can be used as a one-word substitute for the given group of words/phrase.  
To improve a situation or to make something better

1. abscond
2. abide
3. ameliorate
4. abolish

Correct Option - 3

---

**Que. 79** Select the most appropriate ANTONYM of the underlined word.  
The manager made me feel inferior without any reason at the office.

1. Deceitful
2. Superior
3. Lesser
4. Fugitive

Correct Option - 2

---

**Que. 80** **Directions: Choose the word or phrase which is an antonym or the most opposite in meaning to the word or phrase given below and mark the correct answer.**

Frugal

1. Copious
2. Generous
3. Extravagant
4. Ostentatious

Correct Option - 3

---

**Que. 81** In the question below, a part of the sentence has been underlined. Below are given the alternatives to the underlined part which may improve the sentence. Choose the correct alternative. If the sentence needs no improvement, choose 'No Improvement' as your answer.

Eggs and dietary cholesterol does not affect adversely the cholesterol levels in the blood.

1. Do not adversely affect
2. Does not adversely affect
3. Did not adversely affect
4. No improvement

Correct Option - 1

---

**Que. 82** Select the most appropriate option to substitute the underlined segment in the given sentence.  
You must go to the book fair if you are liking it or not.

1. whether you have liked
2. if you like it
3. although you are liking it
4. whether you like it

Correct Option - 4

---

**Que. 83** Select the most appropriate ANTONYM of the given word.  
Exclusion

1. Discharge
2. Commotion
3. Wreck
4. Admittance

Correct Option - 4

---

**Que. 84** Choose the most suitable pronoun for the given sentence:  
The police finished \_\_\_\_\_ investigation.

1. their
2. his
3. its
4. our

Correct Option - 1

---

**Que. 85** **Direction: Choose the most suitable pronouns for the given sentence:**  
The cat bit \_\_\_\_\_ tail and hurt \_\_\_\_\_.

1. her ... itself
2. my ... itself
3. its ... itself
4. it's ... her

Correct Option - 3

---

**Que. 86** Select the most appropriate synonym of the given word.  
Evocative

1. Inspiring
2. Boring
3. Deceiving
4. Amazing

Correct Option - 1

---

**Que. 87** From the options given below choose one that is NOT the correct synonym of the underlined word.

Ashok was a native of that town and so he felt really comfortable there.

1. Indigenous
2. Alien
3. Local
4. Aboriginal

Correct Option - 2

---

**Que. 88** Choose the wrongly spelt word.

1. Accent
2. Ascent
3. Adiction
4. Absolve

Correct Option - 3

---

**Que. 89** Directions: In the following question, out of the four alternatives, select the alternative which will improve the underlined part of the sentence. In case no improvement is needed, select the "No improvement" option.

Hoping not to be disturbed, I sat down in my easy chair to read the book I won as a prize.

1. I have won as a prize
2. I had won as a prize
3. I win as a prize.
4. No improvement.

Correct Option - 2

---

**Que. 90** Directions: In the following question, out of the four alternatives, select the alternative which will improve the underlined part of the sentence. In case no improvement is needed, select the "No improvement" option.

The catalogue of religious violence, incitement and wrecking of the rule of law in several parts of the country remain an unsettling fact.

1. Several parts of the country remains an unsettle fact.
2. Several parts of the country remains a unsettling fact.
3. Several parts of the country remains an unsettling fact.
4. No improvement.

Correct Option - 3

---

**Que. 91** **Direction: In the following question, there is a related pair of words given. Each pair is followed by four other pairs of words. Choose the pair from the given option the pair of words that best expresses the relationship like the original pair.**

Colossal: Massive

1. Evade : Confront
2. Lucid : Ambiguous
3. Inarticulate : Hesitant
4. Vivid : Dull

Correct Option - 3

---

**Que. 92** **Choose the word that means the same as the given word.**  
Obligation

1. Imperative
2. Loophole
3. Discharge
4. Quietus

Correct Option - 1

---

**Que. 93** **Direction: In each of the following sentences, find out which part of the sentence has an error.**  
Everyone who was injured (A) / in the accident (B) / were taken to the hospital (C) / No error

1. (A)
2. (B)
3. (C)
4. No error

Correct Option - 3

---

**Que. 94** **Identify the INCORRECTLY spelt word in the given sentence.**

The mischivous cat knocked over a vase, leaving a mess on the floor and causing chaos in the house.

1. leaving
2. chaos
3. knocked
4. mischivous

Correct Option - 4

---

**Que. 95** **Which of the following word is opposite in meaning to the underlined word?**

Naravane asserted that the Army will hold on to its positions in eastern Ladakh.



1. Declare
2. Contend
3. Argue
4. Disclaim

Correct Option - 4

---

**Que. 96** **Direction:** Read the passage given below and answer the questions by choosing the correct/most appropriate options:

Sad indeed is the lot of the lone pioneer who swims against the current of apathy, ignorance and hostility of his times. The fact that posterity often understands him better and honours him is of no consequence during his lifetime. Socrates paid the ultimate price for his convictions but is today ranked among the all-time great thinkers. Even in a technical subject like science one cannot forget the ordeal that Galileo went through. His predecessor, Nicolaus Copernicus, was smarter for not revealing his theory of the solar system until he was on his death-bed! Somewhat better, but still bitter, was the fate of Charles Babbage, the 19<sup>th</sup> century English mathematician, who with amazing insight thought up all the essential features of the modern computer and laboured prodigiously during his lifetime to turn them into reality. Sadly, all his efforts came to a naught in practice and only drew derision from his contemporaries. His name went into oblivion till the development of modern computers made scientists realise how prescient Babbage had been.

It has been the dream of mankind to make machines do the laborious, uninteresting but necessary mathematical calculations involved in commerce, finance, census, etc. The earliest such device was the abacus, invented 2,500 years ago and which is still widely in use in the Far East. The invention of the logarithm and the slide rule was the next major step several centuries later. In the 17<sup>th</sup> century, Blaise Pascal and Leibnitz developed the first mechanical adding machines using gear wheels. Then Charles Babbage came on the scene.

The central idea of the passage is

1. that men of genius are thought very highly by their contemporaries
2. that their contemporaries are jealous of them
3. that they have to struggle a lot
4. that they die a happy death

Correct Option - 3

---

**Que. 97** Which of the following statements is not true according to the passage?

1. Pioneers in any field are defeated by their society
2. They are looked at with disfavour
3. They are patronized by the state
4. They have to cope with the hostility of their times

Correct Option - 3

---

**Que. 98** The word 'apathy' used in the passage means

1. violence
2. ignorance
3. criticism



4. indifference

Correct Option - 4

---

**Que. 99** Which of the following words is opposite in meaning to the word, 'hostility' as used in the passage?

1. encouragement
2. agreement
3. cooperation
4. friendliness

Correct Option - 4

---

**Que. 100** Galileo's tale was

1. similar to that of Copernicus
2. worse than that of Copernicus
3. better than that of Copernicus
4. better than that of Socrateswqa

Correct Option - 2

---

**Que. 101** कामदेव का पर्याय है-

1. रतिपति
2. हलायुध
3. माधव
4. अज

Correct Option - 1

---

**Que. 102** निम्नलिखित में से कौन-सा शब्द 'पति' का पर्यायवाची है?

1. विधाता
2. भर्ता
3. विभु
4. भार्या

Correct Option - 2

---

**Que. 103** 'जंगल' का पर्यायवाची है -

1. प्रमोद
2. विश्रान्ति
3. कांतार



4. दिव

Correct Option - 3

---

**Que. 104** 'अष्टाध्यायी' का सामासिक विग्रह क्या होगा?

1. 'अष्टा अध्याय
2. 'अष्टाअध्यायी'
3. आठ अध्यायों का समूह
4. इनमें से कोई नहीं

Correct Option - 3

---

**Que. 105** राजपुत्र शब्द में कौन सा समास है ?

1. बहुव्रीहि समास
2. अव्ययीभाव समास
3. कर्मधारय समस
4. तत्पुरुष समास

Correct Option - 4

---

**Que. 106** किस विकल्प में 'बहुव्रीहि' समास है?

1. पंचपात्र
2. चतुरानन
3. त्रिभुवन
4. चतुर्युग

Correct Option - 2

---

**Que. 107** निम्न में सर्वनाम शब्द है-

1. नींद
2. रोग
3. सफाई
4. कौन

Correct Option - 4

---

**Que. 108** निम्नलिखित शब्द का निर्माण किससे हुआ है?

मनौती

1. क्रिया
2. संज्ञा
3. अव्यय
4. विशेषण

Correct Option - 1

---

**Que. 109** 'मेरेको अपने मामा के घर जानी है।' वाक्य का शुद्ध रूप होगा।

1. मेरेको अपने मामा के घर जाना है।
2. मुझे अपने मामा के घर जानी है।
3. मुझे अपनी मामी के घर जानी है।
4. मुझे अपने मामा के घर जाना है।

Correct Option - 4

---

**Que. 110** 'नाट्यशाला में आज 'काठ का घोड़ा' नामक नाटक का खेल हुआ।' उपर्युक्त वाक्य के किस अंश में त्रुटि है? पहचान करें -

1. नामक नाटक
2. आज 'काठ का घोड़ा'
3. का खेल हुआ
4. नाट्यशाला में

Correct Option - 3

---

**Que. 111** इनमें से कौन-सा शब्द 'पुत्र' का अनेकार्थी शब्द है?

1. पूत
2. पुरुष
3. ईश्वर
4. राधा

Correct Option - 1

---

**Que. 112** 'दावानल' इस एक शब्द के लिए उचित अनेक शब्द चुनिए।

1. पेट की आग
2. जंगल की आग
3. पानी की आग
4. समुद्र की आग

Correct Option - 2

---

**Que. 113** 'जानने की इच्छा' के लिए एक शब्द होगा:

1. जिजीविषा
2. अभिलाषा
3. पिपासा
4. जिज्ञासा

Correct Option - 4

---

**Que. 114** 'श्रीकृष्ण के अनेक गुणों का \_\_\_\_\_ कवि ने अपनी इस कविता में किया है' - इस वाक्य के रिक्त स्थान के लिए उपयुक्त शब्द चुनें।

1. ध्यान
2. चिन्तन
3. वर्णन
4. मनन

Correct Option - 3

---

**Que. 115** विशाल को नाचने को कहा गया, तो उसने कहा- गाना अच्छा नहीं है। किसी ने ठीक ही कहा है- नाच न जाने आँगन टेढ़ा। - वाक्य में प्रयुक्त लोकोक्ति का अर्थ है

1. काम न जानना और बहाना बनाना
2. न कारण होगा, न कार्य होगा
3. झूठ बोलकर बचना
4. अपनी कमी को छिपा लेना

Correct Option - 1

---

**Que. 116** 'काला अक्षर भैस बराबर' लोकोक्ति का सही अर्थ है-

1. पढ़ा लिखा न होना
2. पढ़ा लिखा होना
3. विद्वान होना
4. मूर्ख होना

Correct Option - 1

---

**Que. 117** यद्यपि का सन्धि-विच्छेद है-

1. यदि + अपि
2. यद्य + अपि
3. य + द्यपि

4. यद्या + अपि

Correct Option - 1

**Que. 118** उल्लेख शब्द का संधि-विच्छेद क्या होगा ?

1. उल + लेख
2. उलः+लेख
3. उत् + लेख
4. उत्त + लेख

Correct Option - 3

**Que. 119** निम्न में कौन सा शब्द तत्सम है?

1. क्षेत्र
2. गधा
3. गाय
4. घर

Correct Option - 1

**Que. 120** 'बेंत' का तत्सम रूप है-

1. वेन्त
2. वेत्र
3. वेन्त्र
4. वेंतृ

Correct Option - 2

**Que. 121** एक गद्यांश दिया गया है। गद्यांश को ध्यानपूर्वक पढ़ें तथा प्रत्येक प्रश्न के चार विकल्पों में से सही विकल्प चुने।

संपूर्ण विश्व में 8 मार्च को अंतर्राष्ट्रीय महिला दिवस मनाया जाता है। इस दिवस को मनाने का उद्देश्य नारी को उसके अधिकारों के प्रति प्रोत्साहित कर उसे सशक्त होने का अवसर प्रदान करना है जिससे वह न केवल खुद को सशक्त कर सके बल्कि उन्नत समाज के लिए महत्वपूर्ण योगदान दे सके। भारत में, महिलाओं को सशक्त बनाने के लिये सबसे पहले समाज में उनके अधिकारों और मूल्यों को मारने वाले उन सभी राक्षसी सोच को मारना जरूरी है। जैसे- दहेज प्रथा, यौन हिंसा, अशिक्षा, भ्रूण हत्या, असमानता, महिलाओं के प्रति घरेलू हिंसा, कार्य स्थल पर यौन शोषण, बाल मजदूरी, वेश्यावृत्ति, मानव तस्करी आदि। स्त्री को सृजन की शक्ति माना जाता है। इस सृजन की शक्ति को विकसित-परिष्कृत कर उसे सामाजिक, आर्थिक, राजनैतिक न्याय, विचार, विश्वास, धर्म और उपासना की स्वतंत्रता, अवसर की समानता का सुअवसर प्रदान करना ही नारी सशक्तिकरण का आशय है। बदलते समय के साथ आधुनिक युग की नारी पढ़-लिख कर स्वतंत्र है। वह अपने अधिकारों के प्रति सजग है तथा स्वयं अपना निर्णय लेती है। अब वह चारदीवारी से बाहर निकलकर देश के लिए विशेष महत्वपूर्ण कार्य करती है। आज स्त्री की छवि भले ही "पवित्र आदरणीय देवी" की नहीं है लेकिन भारतीय संस्कृति के इतिहास के पन्ने पलट कर देखे तो नर और नारी को गृहस्थी की गाड़ी चलाने के लिए दो पहियों की भांति माना गया है। एक के बिना दूसरा अधूरा तथा आश्रयहीन था। आज देश में नारी शक्ति को सभी दृष्टि से सशक्त बनाने के प्रयास किये जा रहे हैं।



देश में कौन-सी शक्ति को सभी दृष्टि से सशक्त बनाने का प्रयास कर रहे हैं?

1. बाल शक्ति
2. वृद्ध शक्ति
3. नर शक्ति
4. नारी शक्ति

Correct Option - 4

---

**Que. 122** आधुनिक युग में क्या बदलाव देखने को मिला है?

1. नारी पढ़-लिखकर चार दीवारी में है।
2. नारी पढ़-लिखकर स्वतंत्र है।
3. नारी दहेज़ प्रथा व यौन शोषण का शिकार।
4. अपने अधिकारों के प्रति सजग नहीं है।

Correct Option - 2

---

**Que. 123** स्त्री को कौन-सी शक्ति भी माना जाता है?

1. असृजन
2. सृजन
3. हिंसा
4. शोषण

Correct Option - 2

---

**Que. 124** संपूर्ण विश्व में अंतर्राष्ट्रीय महिला दिवस कब मनाया जाता है?

1. 10 मार्च
2. 8 मार्च
3. 5 मार्च
4. 9 मार्च

Correct Option - 2

---

**Que. 125** उपयुक्त गद्यांश का उपयुक्त शीर्षक क्या होगा?

1. नारी-दहेज़ प्रथा
2. नारी राजनैतिक अन्याय
3. नारी चारदीवारी के भीतर
4. नारी सशक्तिकरण



Correct Option - 4



Teachingninja.in