



Teachingninja.in



Latest Govt Job updates



Private Job updates



Free Mock tests available

Visit - teachingninja.in



Delhi Police Constable

**Previous Year Paper
Driver (Male) 21 Oct
2022 Shift 1**



Constable Driver Male in Delhi Police Examination 2022

Roll Number	
Candidate Name	
Venue Name	Webinfotron Technologies Pvt. Ltd.
Exam Date	21/10/2022
Exam Time	9:00 AM - 10:30 AM
Subject	Constable Driver Male in Delhi Police Examination 2022

Section : Part-A-General Awareness

Q.1 Which of the following was one of the founders of the American spaceflight company "Virgin Galactic"?

- Ans ☒ 1. Richard Branson
- ☒ 2. Jack Dorsey
- ☒ 3. Larry page
- ☒ 4. Jeff Bezos

Question ID : 26433098116
Status : Not Answered
Chosen Option : --

Q.2 Which of the following state governments declared the 'Sushma Swaraj Award' for women in March 2022?

- Ans ☒ 1. Haryana
- ☒ 2. Madhya Pradesh
- ☒ 3. Karnataka
- ☒ 4. Uttar Pradesh

Question ID : 26433072893
Status : Answered
Chosen Option : 1

Q.3 Who among the following was the President of the Lucknow session of the Indian National Congress in 1916?

- Ans ☒ 1. Amrit Ranchoddas Seth
- ☒ 2. Ambika Charan Majumdar
- ☒ 3. Bishan Narayan Dhar
- ☒ 4. Jawaharlal Nehru

Question ID : 26433082077
Status : Answered
Chosen Option : 2

Q.4 Which of the following are the part of National Waterways Number 3?

- A. Kochi - Alappuzha
- B. Champakkara canal
- C. Alappuzha - Kollam

Ans ☒ 1. A and B
☒ 2. A, B and C
☒ 3. B and C
☒ 4. A and C

Question ID : 26433054981
Status : Answered
Chosen Option : 2

Q.5 Which of the Five-Year Plans achieved high actual growth rate compared to its target?

Ans ☒ 1. Third
☒ 2. Fourth
☒ 3. First
☒ 4. Second

Question ID : 26433054596
Status : Not Answered
Chosen Option : --

Q.6 'Harmika' is an important architectural feature of which of the following type of architectures?

Ans ☒ 1. Stupa
☒ 2. Mosque
☒ 3. Church
☒ 4. Temple

Question ID : 26433054156
Status : Answered
Chosen Option : 1

Q.7 As per the direction of 2022, what is the annual income limit to be eligible for a microfinance loan?

Ans ☒ 1. ₹4,00,000
☒ 2. ₹3,00,000
☒ 3. ₹2,00,000
☒ 4. ₹5,00,000

Question ID : 26433054567
Status : Not Answered
Chosen Option : --

Q.8 Which Committee suggested for the inclusion of Fundamental Duties?

Ans ☒ 1. Sarkaria Committee
☒ 2. Balwant Rai Mehta Committee
☒ 3. Kothari Committee
☒ 4. Swaran Singh Committee

Question ID : 26433054075
Status : Answered
Chosen Option : 2

Q.9 The 'Pietra Dura' technique was majorly adopted by which of the following ruling dynasties in India?

- Ans ☒ 1. Mughal
☒ 2. Tughlaq
☒ 3. Lodi
☒ 4. Suri

Question ID : 26433054164
Status : Not Answered
Chosen Option : --

Q.10 Which state has five rivers called the Panjnad?

- Ans ☒ 1. Uttar Pradesh
☒ 2. Bihar
☒ 3. Punjab
☒ 4. Madhya Pradesh

Question ID : 26433071596
Status : Answered
Chosen Option : 3

Q.11 In December 2021, who among the following won the 'Woman of the Year Award', given by World Athletics, for grooming talent and encouraging young girls in India to take up sports and to fight for gender equality?

- Ans ☒ 1. Shiny Abraham
☒ 2. PT Usha
☒ 3. Ashwini Akkunji
☒ 4. Anju Bobby George

Question ID : 26433054453
Status : Not Answered
Chosen Option : --

Q.12 Who won the first Kalidas Samman in the field of classical dance?

- Ans ☒ 1. Narayan Shridhar Bendre
☒ 2. Rukmini Devi Arundale
☒ 3. KG Subramanyam
☒ 4. Ram Kumar

Question ID : 26433054414
Status : Not Answered
Chosen Option : --

Q.13 Sher Shah Suri defeated Humayun at _____ in AD 1539.

- Ans ☒ 1. Kannauj
☒ 2. Lahore
☒ 3. Panipat
☒ 4. Chausa

Question ID : 26433081945
Status : Answered
Chosen Option : 4

Q.14 The 51st Conference of Governors and Lieutenant Governors was held at _____.

- Ans
- ☐ 1. Chennai
 - ☐ 2. Bengaluru
 - ☐ 3. Hyderabad
 - ☒ 4. New Delhi

Question ID : 26433074169
Status : Answered
Chosen Option : 4

Q.15 The cultural festival named 'Attolu Eidu' (Island Festival) is celebrated in _____.

- Ans
- ☐ 1. Daman & Diu
 - ☒ 2. Lakshadweep
 - ☐ 3. Chandigarh
 - ☐ 4. Delhi

Question ID : 26433054215
Status : Answered
Chosen Option : 1

Q.16 In 1995, a thrift-and-credit society was started for poor women. What was its main objective?

- Ans
- ☐ 1. To provide free education for women
 - ☐ 2. To provide transport facilities for working women
 - ☒ 3. To encourage poor women to save
 - ☐ 4. To provide jobs for women

Question ID : 26433065419
Status : Answered
Chosen Option : 1

Q.17 When did Prime Minister Narendra Modi launch the RBI Retail Direct Scheme and Reserve Bank- Integrated Ombudsman Scheme?

- Ans
- ☐ 1. January 2022
 - ☐ 2. February 2022
 - ☐ 3. October 2021
 - ☒ 4. November 2021

Question ID : 26433061829
Status : Not Answered
Chosen Option : --

Q.18 In which scheme of the Andhra Pradesh government, financial assistance of ₹15,000 per annum is provided to each mother or a recognised guardian in the below poverty line (BPL) household, irrespective of the number of children in that family studying from Class I to XII, for the 2020-21 academic year?

- Ans
- ☐ 1. Jagananna Vasathi Deevana
 - ☐ 2. Jagananna Gorumudda
 - ☐ 3. Jagananna Vidya Deevana
 - ☒ 4. Jagananna Amma Vodi

Question ID : 26433069225
Status : Answered
Chosen Option : 3

Q.19 Which of the following states showed the highest percentage of decadal growth in India, according to Census (2011)?

- Ans
- ☒ 1. Tamil Nadu
 - ☒ 2. Uttar Pradesh
 - ☒ 3. Bihar
 - ☒ 4. Meghalaya

Question ID : 26433066612
Status : Answered
Chosen Option : 4

Q.20 Citrus fruits are rich in _____

- Ans
- ☒ 1. Vitamin C
 - ☒ 2. Vitamin E
 - ☒ 3. Vitamin D
 - ☒ 4. Vitamin K

Question ID : 26433098111
Status : Answered
Chosen Option : 1

Section : Part-B-General Intelligence

Q.1 Select the option in which the given figure is embedded (Rotation is NOT allowed).



Ans

- ☒ 1.
- ☒ 2.
- ☒ 3.
- ☒ 4.

Question ID : 26433055960
Status : Answered
Chosen Option : 2

Q.2 Which of the following numbers will replace the question mark (?) in the given series?
61, 72, 94, ?, 171

- Ans ☒ 1. 105
☒ 2. 132
☒ 3. 127
☒ 4. 116

Question ID : 26433056464
Status : Answered
Chosen Option : 3

Q.3 'A # B' means 'A is the sister of B'
'A & B' means 'A is the father of B'
'A @ B' means 'A is the wife of B'

If 'P # Q @ R & S # T', then how is P related to T?

- Ans ☒ 1. Daughter
☒ 2. Sister's daughter
☒ 3. Mother's sister
☒ 4. Father's sister

Question ID : 26433097142
Status : Not Answered
Chosen Option : --

Q.4 Based on the position in the English alphabetical order, three of the following letter-clusters are alike in some manner and one is different. Select the odd letter-cluster.

- Ans ☒ 1. CEIO
☒ 2. VXBF
☒ 3. RTXD
☒ 4. UWAG

Question ID : 26433097133
Status : Answered
Chosen Option : 2

Q.5 Select the set in which the numbers are related in the same way as are the numbers of the given sets.

(NOTE : Operations should be performed on the whole numbers, without breaking down the numbers into its constituent digits. E.g. 13 – Operations on 13 such as adding /deleting /multiplying etc. to 13 can be performed. Breaking down 13 into 1 and 3 and then performing mathematical operations on 1 and 3 is not allowed.)

(11, 8, 57)
(13, 4, 51)

- Ans ☒ 1. (8, 6, 48)
☒ 2. (14, 8, 56)
☒ 3. (9, 7, 48)
☒ 4. (12, 9, 69)

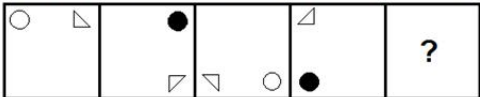
Question ID : 26433057086
Status : Answered
Chosen Option : 3

Q.6 Select the correct combination of mathematical signs to sequentially replace the * signs and to balance the given equation.
 $64 * 4 * 9 * 7 * 2 = 21$

- Ans ☒ 1. $\div - + \times$
☐ 2. $\times - + \div$
☐ 3. $- \times + \div$
☐ 4. $+ \times - \div$

Question ID : 26433057478
Status : Answered
Chosen Option : 1

Q.7 Select the figure from among the given options that can replace the question mark (?) in the following series.



- Ans ☐ 1.
☒ 2.
☐ 3.
☐ 4.

Question ID : 26433055940
Status : Answered
Chosen Option : 2

Q.8 The second number in the given number pairs is obtained by performing certain mathematical operation(s) on the first number. The same operation(s) are followed in all the number pairs except one. Find that odd number pair.

- Ans ☐ 1. 33 : 9
☐ 2. 25 : 7
☐ 3. 49 : 13
☒ 4. 43 : 11

Question ID : 26433057465
Status : Answered
Chosen Option : 4

Q.9 Select the option that is related to the fifth letter-cluster in the same way as the second letter-cluster is related to the first letter-cluster and the fourth letter-cluster is related to the third letter-cluster.

DIVINE : ENIVID :: NATURE : ERUTAN :: PERSON : ?

- Ans
- ☒ 1. ONRSEP
 - ☒ 2. NORSEP
 - ☒ 3. NOSREP
 - ☒ 4. ONSREP

Question ID : 26433097150
Status : Answered
Chosen Option : 3

Q.10 Which two signs and numbers need to be interchanged to make the following equation correct?

$(42 \times 13) + (6 \times 4) - (39 \div 3) = 105$

- Ans
- ☒ 1. 42 and 39, + and -
 - ☒ 2. 42 and 6, + and -
 - ☒ 3. 13 and 3, + and -
 - ☒ 4. 13 and 4, + and -

Question ID : 26433057104
Status : Answered
Chosen Option : 3

Q.11 Which of the option figures is the exact mirror image of the given problem figure when the mirror is held at the right side?

Problem figure:

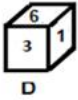
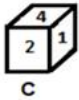
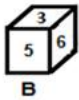
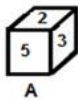
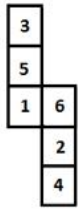


Ans

- ☒ 1.
- ☒ 2.
- ☒ 3.
- ☒ 4.

Question ID : 26433057387
Status : Answered
Chosen Option : 3

Q.12 If the given sheet is folded to form a cube, which of the following figures are possible?



Ans ☒ 1. Only B and C

☐ 2. Only C and D

☐ 3. Only A, B and C

☐ 4. Only A and B

Question ID : 26433059910

Status : Answered

Chosen Option : 1

Q.13 In a certain code language, 'BAG' is written as '9' and 'PURSE' is written as '25'. How will 'WALLET' be written in that language?

Ans ☐ 1. 40

☒ 2. 36

☐ 3. 30

☐ 4. 49

Question ID : 26433097144

Status : Answered

Chosen Option : 2

Q.14 एक महिला की ओर इशारा करते हुए, राम ने कहा, "वह मेरी पत्नी के भाई के पिता की पत्नी के इकलौते बेटे की बहन है।" उस महिला का राम की पत्नी की मां से क्या संबंध है?

Ans ☒ 1. बेटी

☐ 2. बहन

☐ 3. ननद

☐ 4. नवासी

Question ID : 26433067587

Status : Answered

Chosen Option : 1

Q.15 Select the set in which the numbers are related in the same way as are the numbers of the following sets. (NOTE : Operations should be performed on the whole numbers, without breaking down the numbers into its constituent digits. E.g. 13 – Operations on 13 such as adding /deleting /multiplying etc. to 13 can be performed. Breaking down 13 into 1 and 3 and then performing mathematical operations on 1 and 3 is not allowed.)

(20, 160, 60)

(25, 200, 75)

Ans ☒ 1. (36, 164, 46)

☒ 2. (19, 178, 36)

☒ 3. (34, 177, 44)

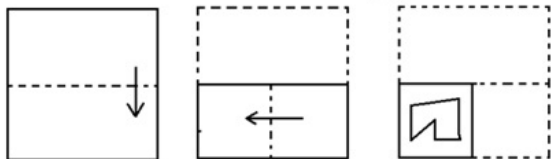
☒ 4. (22, 130, 50)

Question ID : 26433056446

Status : Answered

Chosen Option : 1

Q.16 The sequence of folding a piece of paper and the manner in which the folded paper has been cut is shown below. Choose the figure that would most closely resemble the unfolded form of the paper.

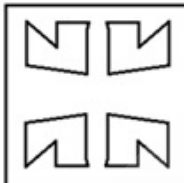


Ans

☒ 1.



☒ 2.



☒ 3.



☒ 4.



Question ID : 26433067449

Status : Not Answered

Chosen Option : --

Q.17 Which of the following numbers will replace the question mark (?) in the given series?
525, 400, 336, 309, 301, ?

Ans ☒ 1. 300

☐ 2. 298

☐ 3. 299

☐ 4. 296

Question ID : 26433057330

Status : Answered

Chosen Option : 1

Q.18 Three statements are given followed by three conclusions numbered I, II and III.
Assuming the statements to be true, even if they seem to be at variance with commonly known facts, decide which of the conclusions logically follow(s) from the statements.

Statements:

All umbrellas are raincoats.

All raincoats are sweaters.

All sweaters are jackets.

Conclusions:

I. Some jackets are umbrellas.

II. No jacket is a raincoat.

III. Some sweaters are umbrellas.

Ans ☐ 1. All conclusions follow

☐ 2. Only conclusions I and II follow

☐ 3. Only conclusions II and III follow

☒ 4. Only conclusions I and III follow

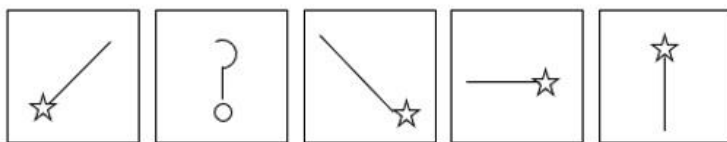
Question ID : 26433068647

Status : Answered

Chosen Option : 4




Q.19 Select the figure that will replace the question mark (?) in the given figure series.




Ans

✗ 1.



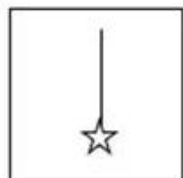
✗ 2.



✗ 3.



✓ 4.



Question ID : 26433056598

Status : Answered

Chosen Option : 2

Q.20 In a code language, 'flip this coin' is written as 'es pt ki', 'coin was lost' is written as 'th ki ol' and 'was this real' is written as 've th es'. What is the code for 'lost real' in this language?

Ans ✓ 1. ve ol

✗ 2. th ve

✗ 3. ol es

✗ 4. es th

Question ID : 26433055274

Status : Answered

Chosen Option : 3

Section : Part-C-Numerical Ability

Q.1 A cuboidal water tank contains 256 litres of water. Its depth is half of its length and its breadth is $\frac{1}{4}$ of the difference between its length and depth. The length of the tank is _____.

- Ans** ☒ 1. 16 cm
☒ 2. 18 cm
☒ 3. 14 cm
☒ 4. 12 cm

Question ID : 26433063977
Status : Answered
Chosen Option : 1

Q.2 Ramesh takes twice as long as Naresh and Mahesh together to complete a job. Naresh takes three times as long as Ramesh and Mahesh together to complete a job. If all the three working together can complete the job in 30 days, then find the number of days Ramesh alone will take to finish the job.

- Ans** ☒ 1. 90 days
☒ 2. 96 days
☒ 3. 98 days
☒ 4. 100 days

Question ID : 26433065008
Status : Answered
Chosen Option : 1

Q.3 In what time will ₹6,400 amount to ₹12,500 if compounded 25% per annum?

- Ans** ☒ 1. 1 year
☒ 2. 4 years
☒ 3. 2 years
☒ 4. 3 years

Question ID : 26433062644
Status : Answered
Chosen Option : 4

Q.4 An electronic store owner allows two successive discounts of 15% and 20% on each item. As an incentive, if the net payment after the discounts is above ₹30,000, the customer gets an additional discount of 4%. The store also has a scheme of reward points credited to the customer's account on previous purchases from the store. This enables a customer to get free shopping worth ₹0.25 on every 1 reward point earned. A customer decides to buy a hot water geyser that is marked at ₹48,000. What will be its net selling price (in ₹) for him if he has 1680 reward points to his credit on the previous purchases from this store?

- Ans** ☒ 1. 34,190
☒ 2. 30,419
☒ 3. 39,410
☒ 4. 30,914

Question ID : 26433061893
Status : Answered
Chosen Option : 2

Q.5 A number is increased by 30% and then decreased by 30%. Finally, the number:

- Ans
- ☐ 1. is decreased by 10%
 - ☐ 2. is increased by 9%
 - ☐ 3. does not change
 - ☒ 4. is decreased by 9%

Question ID : 26433063454

Status : Answered

Chosen Option : 4

Q.6 In what ratio should water be mixed with milk at Rs.29 per litre so as to get the average price of the mixture at Rs.25 per litre? (Assuming the cost price of water to be zero.)

- Ans
- ☐ 1. 23 : 4
 - ☒ 2. 25 : 4
 - ☐ 3. 4 : 15
 - ☐ 4. 4 : 23

Question ID : 26433073082

Status : Answered

Chosen Option : 2

Q.7 Which of the following options is the smallest?

- Ans
- ☒ 1. $\frac{99}{6 \text{ of } 3} + \frac{58}{116} + 132 \div 11$
 - ☐ 2. $(\frac{2}{5} + \frac{4}{3}) \times 30$
 - ☐ 3. $32 \div 8 + \frac{3}{5} \text{ of } 85$
 - ☐ 4. $\frac{21}{63} \text{ of } 33 + (6.5 \times 4)$

Question ID : 26433058192

Status : Answered

Chosen Option : 1

Q.8 A table is bought for Rs.800 and sold for Rs.950. Find the profit percent.

- Ans
- ☐ 1. 18.70%
 - ☒ 2. 18.75%
 - ☐ 3. 19%
 - ☐ 4. 19.75%

Question ID : 26433063464

Status : Answered

Chosen Option : 2

Q.9 If the mean proportional between two numbers is 18 and the first number is greater than the second number by 15, find the first number.

- Ans
- ☒ 1. 27
 - ☐ 2. 36
 - ☐ 3. 18
 - ☐ 4. 15

Question ID : 26433061430

Status : Answered

Chosen Option : 1

Q.10 In a race of 800m, Surya beats Kamal by 150m or 30sec. Find the speed of Surya in km/h.

Ans

✓ 1. $22\frac{2}{13}$ km/h

✗ 2. $18\frac{2}{11}$ km/h

✗ 3. $21\frac{2}{11}$ km/h

✗ 4. $19\frac{3}{13}$ km/h

Question ID : 26433061170

Status : Not Answered

Chosen Option : --

Section : Part-D-Road Sense, Vehicle Maintenance, Traffic Rules/Signals Vehicle and Environmental Pollution

Q.1 The validity of International Driving Permit is for _____ years.

Ans

✗ 1. four

✓ 2. one

✗ 3. two

✗ 4. three

Question ID : 26433097917

Status : Answered

Chosen Option : 2

Q.2 Colorless, odorless, tasteless poisonous gas is _____

Ans

✓ 1. carbon monoxide

✗ 2. carbon dioxide

✗ 3. nitric oxide

✗ 4. sulphur dioxide

Question ID : 26433097894

Status : Answered

Chosen Option : 1

Q.3 What is the purpose of catalic converter in IC engine of a car?

Ans

✓ 1. Reduce air pollution

✗ 2. Reduce temperature

✗ 3. Reduce speed

✗ 4. Reduce oil consumption

Question ID : 26433097974

Status : Answered

Chosen Option : 3

Q.4 When a cow is standing across the road?

- Ans
- ☐ 1. Move fast from behind ignoring cow
 - ☒ 2. Move slowly with horn to push it a side
 - ☐ 3. Wait until it clears the road
 - ☐ 4. Pass it from front

Question ID : 26433097936
Status : Answered
Chosen Option : 2

Q.5 Which meter is used to indicate distance covered by the vehicle?

- Ans
- ☐ 1. Speedometer
 - ☐ 2. Techometer
 - ☐ 3. Multimeter
 - ☒ 4. Odometer

Question ID : 26433097965
Status : Answered
Chosen Option : 4

Q.6 Which of the following vehicles does not require a PUC certificate in India?

- Ans
- ☐ 1. Diesel vehicle
 - ☐ 2. Petrol vehicle
 - ☐ 3. CNG vehicle
 - ☒ 4. Electric vehicle

Question ID : 26433097959
Status : Answered
Chosen Option : 4

Q.7 चौड़ी सड़क पर किस प्रकार की पार्किंग अधिक उपयुक्त होती है?

- Ans
- ☐ 1. समानांतर (Parallel)
 - ☐ 2. क्रॉस (cross)
 - ☒ 3. आनत (Inclined)
 - ☐ 4. पंक्तिबद्ध (Inline)

Question ID : 26433097943
Status : Answered
Chosen Option : 1

Q.8 निम्नलिखित में से क्या ब्रेक वार्निंग लाइट को चालू कर सकता है?

- Ans
- ✓ 1. ब्रेक फ्लूइड का स्तर कम होना
 - ✗ 2. पार्किंग ब्रेक की क्षति
 - ✗ 3. ब्रेक लाइन में हवा
 - ✗ 4. उच्च ब्रेक फ्लूइड स्तर

Question ID : 26433097973
Status : Not Answered
Chosen Option : --

Q.9



This sign indicates which of the following?

- Ans
- ✗ 1. Give away
 - ✓ 2. Stop
 - ✗ 3. No Parking
 - ✗ 4. No Entry

Question ID : 26433097997
Status : Answered
Chosen Option : 2

Q.10 When a vehicle is approaching with flashing red or blue light you should?

- Ans
- ✗ 1. Speedup your vehicle
 - ✗ 2. Stop where you are
 - ✗ 3. Ignore the vehicle
 - ✓ 4. Keep to the left of the road and slow down

Question ID : 26433097963
Status : Answered
Chosen Option : 4

Q.11 _____ is the adjustment of an internal combustion engine to achieve optimum performance and increase the engine's power output, economy.

- Ans
- ✗ 1. Mirror Tuning
 - ✓ 2. Engine tuning
 - ✗ 3. Seat tuning
 - ✗ 4. Tyre tuning

Question ID : 26433097932
Status : Answered
Chosen Option : 2

Q.12 Despite having a valid PUC certificate, if a vehicle is found polluting the environment, then the PUC certificate of the vehicle is cancelled and its owner is directed (under Rule 116 of CMV Rules) to produce a fresh PUC certificate within _____ days.

- Ans**
- ☒ 1. 10
 - ☒ 2. 3
 - ☒ 3. 7
 - ☒ 4. 5

Question ID : **26433098057**
Status : **Answered**
Chosen Option : 1

Q.13 As per BS-VI emission norms, diesel engines will have to reduce their particulate matter levels by _____ percent.

- Ans**
- ☒ 1. 68
 - ☒ 2. 50
 - ☒ 3. 75
 - ☒ 4. 82

Question ID : **26433098041**
Status : **Not Answered**
Chosen Option : --

Q.14 Which of the following is called the secondary air pollutant?

- Ans**
- ☒ 1. Carbon monoxide
 - ☒ 2. Ozone
 - ☒ 3. Nitrogen Dioxide
 - ☒ 4. PANs

Question ID : **26433097977**
Status : **Answered**
Chosen Option : 4

Q.15 Vehicles equipped with catalytic converter should use unleaded petrol, because _____ reduces effectiveness of the catalyst.

- Ans**
- ☒ 1. water
 - ☒ 2. sulphur
 - ☒ 3. hydrocarbons
 - ☒ 4. lead

Question ID : **26433097889**
Status : **Answered**
Chosen Option : 3

Q.16 The function of the _____ is to produce a spark in the engine combustion chamber at the end of the compression stroke.

- Ans
- ☐ 1. starting system
 - ☐ 2. lighting system
 - ☐ 3. charging system
 - ☒ 4. ignition system

Question ID : 26433097928
Status : Answered
Chosen Option : 4

Q.17 The following sign represents.



- Ans
- ☒ 1. Cross road
 - ☐ 2. Hotel
 - ☐ 3. No entry
 - ☐ 4. Hospital

Question ID : 26433098047
Status : Answered
Chosen Option : 1

Q.18 This sign means



- Ans
- ☒ 1. Stop
 - ☐ 2. Slop ahead
 - ☐ 3. Hospital
 - ☐ 4. No parking

Question ID : 26433097950
Status : Answered
Chosen Option : 1

Q.19 Which brake is known as service brake?

- Ans
- ☒ 1. Foot brake
 - ☐ 2. Hand brake
 - ☐ 3. Parking brake
 - ☐ 4. Emergency brake

Question ID : 26433097969
Status : Not Answered
Chosen Option : --

Q.20



This sign indicates which of the following?

Ans

- ✓ 1. Compulsory Keep Left
- ✗ 2. Compulsory Ahead or Turn Left/Right
- ✗ 3. Compulsory Ahead
- ✗ 4. Compulsory Turn Left/Right

Question ID : 26433097998

Status : Answered

Chosen Option : 1

Q.21 This sign means



Ans

- ✗ 1. Hill
- ✓ 2. Go ahead
- ✗ 3. Slop ahead
- ✗ 4. Go slow

Question ID : 26433097952

Status : Answered

Chosen Option : 2

Q.22 Under the penal section _____ in the Motor Vehicles Act, driving without a license attracts a fine.

Ans

- ✗ 1. 192
- ✓ 2. 181
- ✗ 3. 191
- ✗ 4. 180

Question ID : 26433097903

Status : Not Answered

Chosen Option : --

Q.23 The _____ converts the turning motion of the steering wheel into the back-and-forth motion of the link rod of the steering linkage.

Ans

- ✗ 1. steering Shaft
- ✓ 2. steering gear
- ✗ 3. steering Wheel
- ✗ 4. steering Column

Question ID : 26433097926

Status : Not Answered

Chosen Option : --

Q.24 This sign represents



- Ans
- ✓ 1. Compulsory turn left
 - ✗ 2. Keep left
 - ✗ 3. Keep right
 - ✗ 4. There is no road to the left

Question ID : 26433098049
Status : Answered
Chosen Option : 1

Q.25 Which is not a part of air conditioning system

- Ans
- ✗ 1. Compressor
 - ✓ 2. Alternator
 - ✗ 3. Receiver-drier
 - ✗ 4. Condenser

Question ID : 26433098079
Status : Answered
Chosen Option : 2

Q.26 Which is not automobile fuel?

- Ans
- ✗ 1. Petrol
 - ✓ 2. PNG
 - ✗ 3. CNG
 - ✗ 4. Diesel

Question ID : 26433098055
Status : Answered
Chosen Option : 2

Q.27 Which of the following is NOT correct regarding a PUC certificate?

Ans ☒ 1.

After the expiry of period of one year from the date of first registration, every motor vehicle is required to carry a valid PUC certificate.

☒ 2.

If a vehicle does not have a valid PUC certificate, then its owner is liable to be prosecuted under Section 190(2) of the Motor Vehicles Act.

☒ 3.

During pollution check if a vehicle is found polluting beyond prescribed norms, necessary repairs and tuning in the vehicle are required.

☒ 4.

If the vehicle is not polluting then it can be driven even without a PUC certificate.

Question ID : 26433098058

Status : Answered

Chosen Option : 4

Q.28 Sequence of operation of traffic light signal

Ans ☒ 1. Yellow-red-Yellow

☒ 2. Green-red-yellow

☒ 3. Red- green-yellow

☒ 4. Red-yellow-red

Question ID : 26433097964

Status : Answered

Chosen Option : 2

Q.29 In India, all battery-operated vehicles shall exhibit their registration mark in _____ colour on _____ background for transport vehicles.

Ans ☒ 1. yellow, black

☒ 2. yellow, green

☒ 3. white, black

☒ 4. white, red

Question ID : 26433098066

Status : Answered

Chosen Option : 2

Q.30 वाहन के टायरों को आगे से पीछे या अगल-बगल से विशिष्ट पैटर्न में नियमित रूप से बदलने को क्या कहा जाता है?

Ans ☒ 1. टायर की मरम्मत (tire repair)

☒ 2. टायर में नई रबर चढ़ाना (tire retreading)

☒ 3. टायर बर्निंग (tire burning)

☒ 4. टायर क्रमावर्तन (tire rotation)

Question ID : 26433097995

Status : Answered

Chosen Option : 2

Q.31 After the issue of learner's licence, after how many days can one apply for a driving license?

- Ans
- ☐ 1. 40
 - ☐ 2. 20
 - ☒ 3. 30
 - ☐ 4. 10

Question ID : 26433098018
Status : Answered
Chosen Option : 3

Q.32 _____ is used to read RPM of an engine.

- Ans
- ☐ 1. Odometer
 - ☐ 2. Volt meter
 - ☒ 3. Tachometer
 - ☐ 4. Ammeter

Question ID : 26433097933
Status : Answered
Chosen Option : 3

Q.33 In a 'perfect' fuel combustion, the oxygen in the air converts all the hydrogen in the fuel to _____.

- Ans
- ☐ 1. sulphur oxide
 - ☐ 2. carbon dioxide
 - ☒ 3. water
 - ☐ 4. nitrogen

Question ID : 26433097906
Status : Answered
Chosen Option : 3

Q.34 _____ is to control the emission level of various pollutants by changing the chemical characteristics of exhaust gases.

- Ans
- ☐ 1. Charcoal Canister
 - ☒ 2. Catalytic converter
 - ☐ 3. EGR valve
 - ☐ 4. PCV Valve

Question ID : 26433097988
Status : Not Answered
Chosen Option : --

Q.35 Which of the following is NOT a function of lubrication of an IC engine?

- Ans
- ☐ 1. To reduce friction between moving parts
 - ☐ 2. To reduce wear and tear of the moving parts
 - ☒ 3. To provide perfume odor in car
 - ☐ 4. To provide cushioning effect

Question ID : 26433097931
Status : Answered
Chosen Option : 3

Q.36 निम्नलिखित में से क्या धूम-कोहरे (SMOG) के उत्पन्न होने का कारण है?

- Ans
- ☐ 1. भस्मक
 - ☐ 2. वाहनों से उत्सर्जन
 - ☒ 3. वाहनों से भस्मक और उत्सर्जन दोनों
 - ☐ 4. इनमें से कोई भी नहीं

Question ID : 26433097975

Status : Answered

Chosen Option : 3

Q.37 What is the full form of CNG?

- Ans
- ☐ 1. Clean Natural Gas
 - ☒ 2. Compressed Natural Gas
 - ☐ 3. Compressed Neat Gasoline
 - ☐ 4. Clean Natural Gasoline

Question ID : 26433097904

Status : Answered

Chosen Option : 2

Q.38 Which of the following is NOT a fuel supply component for CI engine?

- Ans
- ☐ 1. Fuel tank
 - ☐ 2. Fuel injectors
 - ☐ 3. Fuel lines
 - ☒ 4. Air cleaner

Question ID : 26433098012

Status : Not Answered

Chosen Option : --

Q.39 _____ की कमी से इंजन शोर कर सकता है और बढ़ते घर्षण के कारण इंजन की ट्यून भी बदल सकती हैं।

- Ans
- ☐ 1. ब्रेक फ्लूइड (brake Fluid)
 - ☒ 2. स्नेहन (lubrication)
 - ☐ 3. ईंधन (fuel)
 - ☐ 4. शीतलक (coolant)

Question ID : 26433097934

Status : Answered

Chosen Option : 4

Q.40 Which of the following is a main objective and not a secondary objective of lubrication in vehicles?

- Ans
- ☒ 1. To provide cushioning effect
 - ☒ 2. To provide a sealing action
 - ☒ 3. To provide cooling effect
 - ☒ 4.

To reduce friction between moving parts to its minimum value so that power loss is minimized.

Question ID : 26433098080
Status : Answered
Chosen Option : 4

Q.41 The pistons of IC engines are usually made of _____.

- Ans
- ☒ 1. copper
 - ☒ 2. cast iron
 - ☒ 3. iron
 - ☒ 4. aluminum alloy

Question ID : 26433097919
Status : Not Answered
Chosen Option : --

Q.42 Permanent motor vehicle registration shall be done within _____ days from the date of delivery.

- Ans
- ☒ 1. nine
 - ☒ 2. eight
 - ☒ 3. ten
 - ☒ 4. seven

Question ID : 26433097902
Status : Answered
Chosen Option : 4

Q.43 In a vehicle, thermostat valve is a component of _____.

- Ans
- ☒ 1. Ignition system
 - ☒ 2. Steering system
 - ☒ 3. Lubrication system
 - ☒ 4. Cooling system

Question ID : 26433098071
Status : Answered
Chosen Option : 1

Q.44 In compression ignition engines, fresh air is compressed to very high pressures and temperatures, and the temperature increases up to _____.

- Ans
- ☒ 1. 600°C
 - ☒ 2. 300°C
 - ☒ 3. 448°C
 - ☒ 4. 538°C

Question ID : 26433098022

Status : Not Answered

Chosen Option : --

Q.45 यह आसान और त्वरित संचालन के लिए हॉर्न, लाइट और वाइपर के लिए स्विच प्रदान करता है। यह सुरक्षा के लिए बंधनेवाला है, जो समाघात में गिर जाता है और चालक को चोट लगने की संभावना कम हो जाती है।

यहाँ स्टीयरिंग सिस्टम के किस भाग की बात की जा रही है?

- Ans
- ☒ 1. स्टीयरिंग शाफ्ट
 - ☒ 2. स्टीयरिंग लिंकेजेस
 - ☒ 3. स्टीयरिंग व्हील
 - ☒ 4. स्टीयरिंग कोलुम

Question ID : 26433098043

Status : Answered

Chosen Option : 2

Q.46 Under which circumstance you will avoid overtaking?

- Ans
- ☒ 1. On a curve
 - ☒ 2. When the visibility ahead is clear
 - ☒ 3. After a curve
 - ☒ 4. Signal given by the forward driver

Question ID : 26433097937

Status : Answered

Chosen Option : 1

Q.47 एक मोड़ के पास पहुँचते समय, चालक _____।

- Ans
- ☒ 1. लगातार हॉर्न बजाते हुए तेज गति से ओवरटेक करना चाहिए
 - ☒ 2. को बिना किसी हॉर्न के धीमी गति से ओवरटेक करना चाहिए
 - ☒ 3. को आगे के वाहनों को ओवरटेक नहीं करना चाहिए
 - ☒ 4. लगातार हॉर्न बजाते हुए मध्यम गति से ओवरटेक करना चाहिए

Question ID : 26433098036

Status : Answered

Chosen Option : 3

Q.48 निम्नलिखित में से कौन-सी कार्यशाला में सामान्य गतिविधि नहीं है?

- Ans
- ☒ 1. तेल बदलना
 - ☒ 2. वाहन की धुलाई और धुलाई की प्रक्रिया
 - ☒ 3. ईंधन टैंक भरना
 - ☒ 4. इंजन का माइनर ट्यून अप

Question ID : 26433098060
Status : Answered
Chosen Option : 3

Q.49 वाहन के संपूर्ण या फ्रेमलेस निर्माण के मामले में, _____ चैसिस (chassis) का एक अभिन्न अंग होता है।

- Ans
- ☒ 1. पहिए
 - ☒ 2. फ्रंट और रियर एक्सल
 - ☒ 3. बॉडी
 - ☒ 4. इंजन

Question ID : 26433098011
Status : Not Answered
Chosen Option : --

Q.50 In a vehicle, which of the following is the most appropriate use of side mirror?

- Ans
- ☒ 1. watching the traffic approaching from behind
 - ☒ 2. parking vehicles in reverse
 - ☒ 3. seeing the back-seat passenger
 - ☒ 4. seeing the face

Question ID : 26433098040
Status : Answered
Chosen Option : 1