



Teachingninja.in



Latest Govt Job updates



Private Job updates



Free Mock tests available

Visit - teachingninja.in



Delhi Police Constable

**Previous Year Paper
Driver (Male) 21 Oct
2022 Shift 3**



Exam Date	21/10/2022
Exam Time	5:00 PM - 6:30 PM
Subject	Constable Driver Male in Delhi Police Examination 2022

Section : **Part-A-General Awareness**

Q.1 To pay tribute to Lord Rama, the 'Banganga Festival' is celebrated popularly in which of the following states of India?

- Ans ☒ 1. Tamil Nadu
- ☒ 2. Maharashtra
- ☒ 3. Manipur
- ☒ 4. Punjab

Question ID : 26433054149
Status : Answered
Chosen Option : 1

Q.2 Due to the providing of credit facilities, what was the growth rate of agricultural output during 2007-2012?

- Ans ☒ 1. 5.4% per annum
- ☒ 2. 3.2% per annum
- ☒ 3. 6% per annum
- ☒ 4. 4% per annum

Question ID : 26433065420
Status : Not Answered
Chosen Option : --

Q.3 According to the given statements identify the correct person.
a) He dedicated his life for the upliftment of Dalits and women.
b) In 1848, he opened a school for lower caste girls along with his wife.
c) In 1873, he founded the Satyashodhak Samaj.

- Ans ☒ 1. Jyotiba Phule
- ☒ 2. Raja Ram Mohan Roy
- ☒ 3. Ishwar Chandra Vidyasagar
- ☒ 4. Debendranath Tagore

Question ID : 26433071418
Status : Answered
Chosen Option : 1

Q.4 Which of the following statements about the Kesariya Stupa is INCORRECT?

- Ans ☒ 1. It is more than 204 feet tall.
- ☐ 2. It is taller than the Borobudur Stupa in Java.
- ☐ 3. Locally, it is known as 'Raja Ben ka Deora'.
- ☐ 4. It is located in Bihar.

Question ID : 26433098094
Status : Answered
Chosen Option : 1

Q.5 Padma Vibhushan, Pandit Birju Maharaj is a Kathak dancer of which of the following gharanas?

- Ans ☐ 1. Rajgarh
- ☐ 2. Benaras
- ☒ 3. Lucknow
- ☐ 4. Jaipur

Question ID : 26433097157
Status : Answered
Chosen Option : 3

Q.6 Section 4(2) of the Criminal Procedure (Identification) Act 2022 authorizes the National Crime Records Bureau, to store records of criminals/convicts for a period of _____ years from the date of collection.

- Ans ☒ 1. seventy-five
- ☐ 2. twenty-five
- ☐ 3. ten
- ☐ 4. fifty

Question ID : 26433098091
Status : Answered
Chosen Option : 1

Q.7 _____ was a key participant of the 'Bharat Jodo Yatra', launched in September, 2022.

- Ans ☐ 1. Hardik Patel
- ☒ 2. Rahul Gandhi
- ☐ 3. B S Yediyurappa
- ☐ 4. Arvind Kejriwal

Question ID : 26433098085
Status : Answered
Chosen Option : 2

Q.8 _____ were built to enshrine relics of Buddha and Buddhist saints, or to commemorate events of religious significance.

- Ans ☒ 1. Stupas
- ☐ 2. Viharas
- ☐ 3. Stambhas
- ☐ 4. Chaityas

Question ID : 26433098089
Status : Answered
Chosen Option : 3

Q.9 'Moth ki Masjid' (Masjid Moth) in Delhi was built in the reign of _____.

- Ans
- ☐ 1. Firuz Shah Tughluq
 - ☐ 2. Bahlul Khan Lodi
 - ☐ 3. Ghiyasuddin Tughluq
 - ☒ 4. Sikandar Lodi

Question ID : 26433081939
Status : Answered
Chosen Option : 1

Q.10 Which Indian state has the maximum percentage of population living in poverty among all the States and the Union Territories, according to Government think-tank NITI Aayog's Multidimensional Poverty Index (MPI) 2021?

- Ans
- ☐ 1. Jharkhand
 - ☐ 2. Madhya Pradesh
 - ☐ 3. Assam
 - ☒ 4. Bihar

Question ID : 26433097158
Status : Answered
Chosen Option : 4

Q.11 Under the 'Azadi Ka Amrit Mahotsav', which day in 2021 was observed as the National Pension System Diwas (NPS Diwas)?

- Ans
- ☐ 1. 10 October
 - ☐ 2. 1 September
 - ☐ 3. 10 September
 - ☒ 4. 1 October

Question ID : 26433081879
Status : Not Answered
Chosen Option : --

Q.12 Where is the Kalpakkam Nuclear Power Plant located?

- Ans
- ☐ 1. Gujarat
 - ☐ 2. Rajasthan
 - ☐ 3. Uttar Pradesh
 - ☒ 4. Tamil Nadu

Question ID : 26433054974
Status : Answered
Chosen Option : 4

Q.13 India reported its last polio case from district Howrah, West Bengal in which of the following years?

- Ans
- ☐ 1. 2014
 - ☐ 2. 2012
 - ☒ 3. 2011
 - ☐ 4. 2013

Question ID : 26433098110
Status : Answered
Chosen Option : 1

Q.14 The Preamble declares India as a Republic because:

- Ans
- ☒ 1. India has an elected Parliament
 - ☒ 2. India has an independent and impartial judiciary
 - ☒ 3. India has an elected head of the government
 - ☒ 4. India has an elected head of the state

Question ID : 26433054068

Status : Answered

Chosen Option : 3

Q.15 The process of increasing agricultural production by incorporating modern tools and techniques is known as:

- Ans
- ☒ 1. green revolution
 - ☒ 2. green technology
 - ☒ 3. food revolution
 - ☒ 4. agricultural technology

Question ID : 26433054633

Status : Answered

Chosen Option : 1

Q.16 _____ has been nominated for the '2022 Laureus World Breakthrough of the Year Award' alongside other nominees like Russian tennis superstar Daniil Medvedev and Spanish footballer Pedri.

- Ans
- ☒ 1. Mithali Raj
 - ☒ 2. Neeraj Chopra
 - ☒ 3. PV Sindhu
 - ☒ 4. Manpreet Singh

Question ID : 26433054454

Status : Answered

Chosen Option : 2

Q.17 India rolled out the world's largest vaccination drive on _____

- Ans
- ☒ 1. 16 February 2021
 - ☒ 2. 16 March 2021
 - ☒ 3. 16 January 2021
 - ☒ 4. 16 April 2021

Question ID : 26433098117

Status : Answered

Chosen Option : 4

Q.18 Economist Muhammad Yunus is known as the _____.

- Ans
- ☒ 1. founder of Human Development
 - ☒ 2. founder of Modern Microcredit
 - ☒ 3. founder of Mudra Loan
 - ☒ 4. founder of Kisan Credit

Question ID : 26433054566

Status : Not Answered

Chosen Option : --

Q.19 The Union Cabinet approved a new centrally sponsored Scheme, PM Schools for _____ India (PM SHRI), in September 2022.

- Ans
- ☒ 1. Responsible
 - ☒ 2. Rural
 - ☒ 3. Revolutionary
 - ☒ 4. Rising

Question ID : 26433098101
Status : Answered
Chosen Option : 2

Q.20 In India, which type of soil is also known as Regur soil and is ideal for cotton crops?

- Ans
- ☒ 1. Arid soil
 - ☒ 2. Laterite soil
 - ☒ 3. Black soil
 - ☒ 4. Alluvial soil

Question ID : 26433071612
Status : Answered
Chosen Option : 3

Section : Part-B-General Intelligence

Q.1 Select the option that is related to the fifth letter-cluster in the same way as the second letter-cluster is related to the first letter-cluster and the fourth letter-cluster is related to the third letter-cluster.

SOURCE : UQWTEG :: FIGURE : HKIWTG :: REGION : ?

- Ans
- ☒ 1. TGIKQP
 - ☒ 2. TIGKQP
 - ☒ 3. ITGQKP
 - ☒ 4. ITGKPK

Question ID : 26433097153
Status : Answered
Chosen Option : 1

Q.2 Which number will replace the question mark (?) in the following series?
17, 32, 49, ?, 89, 112

- Ans
- ☒ 1. 62
 - ☒ 2. 72
 - ☒ 3. 68
 - ☒ 4. 78

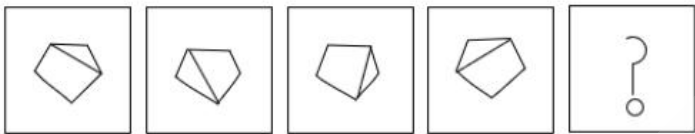
Question ID : 26433055293
Status : Answered
Chosen Option : 3

Q.3 Select the set in which the numbers are related in the same way as are the numbers of the following sets. (NOTE : Operations should be performed on the whole numbers, without breaking down the numbers into its constituent digits. E.g. 13 – Operations on 13 such as adding /deleting /multiplying etc. to 13 can be performed. Breaking down 13 into 1 and 3 and then performing mathematical operations on 1 and 3 is not allowed.)
(15, 225, 5)
(10, 180, 6)

- Ans ☒ 1. (12, 180, 5)
☒ 2. (14, 197, 4)
☒ 3. (11, 188, 6)
☒ 4. (19, 422, 9)

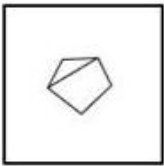
Question ID : 26433056445
Status : Not Answered
Chosen Option : --

Q.4 Select the figure that will replace the question mark (?) in the given figure series.

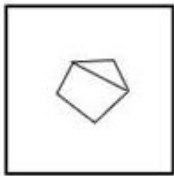


Ans

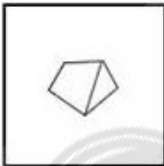
☒ 1.



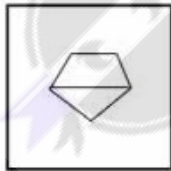
☒ 2.



☒ 3.



☒ 4.



Question ID : 26433056597
Status : Answered
Chosen Option : 4

Q.5 Which number will replace the question mark (?) in the following series?
27, 125, ?, 729, 1331, 2197

- Ans
- ☒ 1. 443
 - ☒ 2. 486
 - ☒ 3. 343
 - ☒ 4. 586

Question ID : 26433055290
Status : Answered
Chosen Option : 3

Q.6 Select the set in which the numbers are related in the same way as are the numbers of the given sets.
(NOTE : Operations should be performed on the whole numbers, without breaking down the numbers into its constituent digits. E.g. 13 – Operations on 13 such as adding /deleting /multiplying etc. to 13 can be performed. Breaking down 13 into 1 and 3 and then performing mathematical operations on 1 and 3 is not allowed.)
(315, 413, 511)
(329, 427, 525)

- Ans
- ☒ 1. (356, 448, 538)
 - ☒ 2. (344, 442, 540)
 - ☒ 3. (379, 471, 590)
 - ☒ 4. (288, 376, 474)

Question ID : 26433057088
Status : Answered
Chosen Option : 2



Q.7 Which of the option figures is the exact mirror image of the given problem figure when the mirror is held at the right side?

Problem figure:

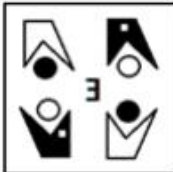


Ans

✗ 1.



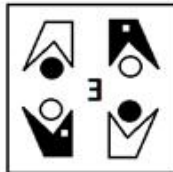
✗ 2.



✗ 3.

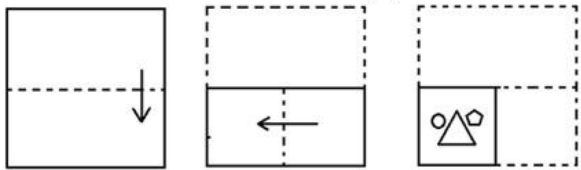


✓ 4.



Question ID : 26433057386
Status : Answered
Chosen Option : 2

Q.8 The sequence of folding a piece of paper and the manner in which the folded paper has been cut is shown below. Choose the figure that would most closely resemble the unfolded form of the paper.



Ans

- ✗ 1.
- ✓ 2.
- ✗ 3.
- ✗ 4.

Question ID : 26433067448
Status : Answered
Chosen Option : 2

Q.9 In a code language, 'OFFICE' is coded as '118' and 'BLACK' is coded as '106'.How will 'PLUME' be coded in that language?

- Ans** ✓ 1. 68
- ✗ 2. 81
- ✗ 3. 61
- ✗ 4. 78

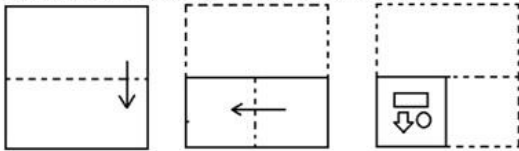
Question ID : 26433055270
Status : Answered
Chosen Option : 1

Q.10 The second number in the given number pairs is obtained by performing certain mathematical operation(s) on the first number. The same operation(s) are followed in all the number pairs except one. Find that odd number pair.

- Ans
- ✗ 1. 12 : 38
 - ✗ 2. 5 : 27
 - ✗ 3. 8 : 26
 - ✓ 4. 3 : 21

Question ID : 26433057463
Status : Answered
Chosen Option : 4

Q.11 The sequence of folding a piece of paper and the manner in which the folded paper has been cut is shown below. Choose the figure that would most closely resemble the unfolded form of the paper.



Ans

- ✗ 1.
- ✓ 2.
- ✗ 3.
- ✗ 4.

Question ID : 26433067453
Status : Answered
Chosen Option : 2

Q.12 Which two signs and numbers need to be interchanged to make the following equation correct?

$$17 + (22 \div 11) - (88 \times 2) - 23 = 30$$

- Ans ☒ 1. 11 and 2, + and \times
☐ 2. 22 and 88, + and \times
☐ 3. 11 and 2, + and \times
☐ 4. 22 and 88, + and \times

Question ID : 26433057105

Status : Answered

Chosen Option : 1

Q.13 A # B means 'A is the sister of B'.

A @ B means 'A is the son of B'.

A & B means 'A is the husband of B'.

A % B means 'A is the wife of B'.

If A # B % C @ D & E, then how is B related to E?

- Ans ☐ 1. Son
☐ 2. Son-in-law
☐ 3. Mother
☒ 4. Daughter-in-law

Question ID : 26433097140

Status : Answered

Chosen Option : 4

Q.14 Three statements are given followed by three conclusions numbered I, II and III.

Assuming the statements to be true, even if they seem to be at variance with commonly known facts, decide which of the conclusions logically follow(s) from the statements.

Statements:

All copies are books.

Some pencils are copies.

No book is an eraser.

Conclusions:

I. No pencil is an eraser.

II. Some copies are not erasers.

III. Some pencils are books.

- Ans ☐ 1. All conclusions follow
☐ 2. Only conclusions I and II follow
☐ 3. Only conclusions I and III follow
☒ 4. Only conclusions II and III follow

Question ID : 26433068832

Status : Answered

Chosen Option : 4

Q.15 Select the correct combination of mathematical signs to sequentially replace the * signs and to balance the given equation.

$$(44 * 6) * 21 * 219 * (72 * 3)$$

- Ans ☐ 1. +, \times , +, =, -
☐ 2. \div , +, =, +, \times
☐ 3. \times , +, =, +, \div
☒ 4. \times , -, =, +, \div

Question ID : 26433057641

Status : Answered

Chosen Option : 4

Q.16 Based on the position in the English alphabetical order, three of the following letter-clusters are alike in some manner and one is different. Select the odd letter-cluster.

- Ans ☒ 1. AZCX
☒ 2. FUHR
☒ 3. PKRI
☒ 4. MNOL

Question ID : 26433097136
Status : Answered
Chosen Option : 2

Q.17 In a certain code language, 'SCIENCE' is written as '2041061546' and 'WONDER' is written as '2416155619'. How will 'QUESTION' be written in that language?

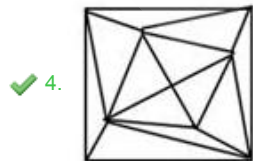
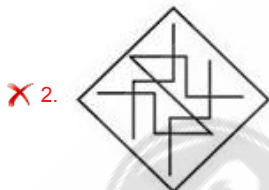
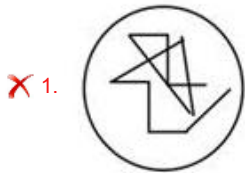
- Ans ☒ 1. 182261021101516
☒ 2. 182262021101615
☒ 3. 182162021111614
☒ 4. 182362021102614

Question ID : 26433097148
Status : Answered
Chosen Option : 2

Q.18 Select the option figure in which the given figure (X) is embedded as its part (rotation is NOT allowed).

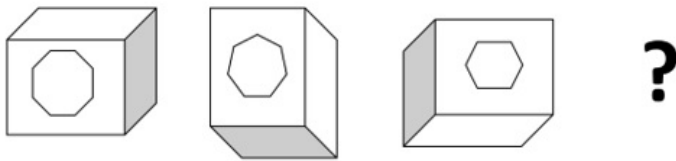


Ans



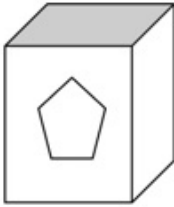
Question ID : 26433056114
Status : Answered
Chosen Option : 4

Q.19 Select the figure that will come next in the following figure series.

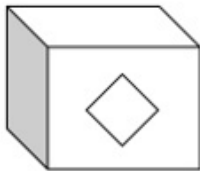


Ans

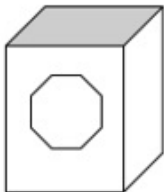
✗ 1.



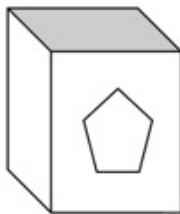
✗ 2.



✗ 3.



✓ 4.



Question ID : 26433056540

Status : Answered

Chosen Option : 4

Q.20 'A % B' means 'A is the wife of B'.
'A + B' means 'A is the brother of B'.
'A @ B' means 'A is the mother of B'.
'A & B' means 'A is the husband of B'.
If $U + V @ W \& X @ Y \% Z$, then how is W related to Z?

Ans

✗ 1. Son

✗ 2. Father

✓ 3. Father-in-law

✗ 4. Son-in-law

Question ID : 26433068263

Status : Answered

Chosen Option : 3

Section : Part-C-Numerical Ability

Q.1 The value of $1.\overline{36} + 3.\overline{24} + 1.\overline{33}$ is:

- Ans
- ☒ 1. $\frac{196}{32}$
 - ☒ 2. $\frac{176}{29}$
 - ☒ 3. $\frac{186}{29}$
 - ☒ 4. $\frac{196}{33}$

Question ID : 26433082357

Status : Not Answered

Chosen Option : --

Q.2 A field is 120 m long and 50 m wide. How many times (rounded off to two decimal places) is its perimeter to the length of its diagonal?

- Ans
- ☒ 1. 1.31
 - ☒ 2. 2.62
 - ☒ 3. 3.42
 - ☒ 4. 3.14

Question ID : 26433061895

Status : Answered

Chosen Option : 2

Q.3 A dishonest dealer professes to sell his items at cost price but uses a weight of 945 grams for a kilogram. Find his gain percentage. (Correct to 2 decimal places)

- Ans
- ☒ 1. 7.75%
 - ☒ 2. 6.25%
 - ☒ 3. 9.25%
 - ☒ 4. 5.82%

Question ID : 26433063698

Status : Answered

Chosen Option : 4

Q.4 The price of an article is reduced by 10% and its daily sale increased by 15%. Find the net percent effect on the daily sale.

- Ans
- ☒ 1. 2.5% decrease
 - ☒ 2. 2.5% increase
 - ☒ 3. 3.5% decrease
 - ☒ 4. 3.5% increase

Question ID : 26433063456

Status : Answered

Chosen Option : 4

Q.5 An amount becomes ₹40,84,101 at 20% per annum for 15 months, which is compounded quarterly. What was the principal?

- Ans
- ☐ 1. ₹44,00,000
 - ☐ 2. ₹40,00,000
 - ☒ 3. ₹32,00,000
 - ☐ 4. ₹36,00,000

Question ID : 26433062645
Status : Not Answered
Chosen Option : --

Q.6 If the outer diameter of a spherical shell is 18 cm and inner diameter is 12 cm, then find the volume of metal contained in the shell (take $\pi=3.14$) correct to two places of decimal.

- Ans
- ☐ 1. 2199.88 cm³
 - ☒ 2. 2147.76 cm³
 - ☐ 3. 2189.75 cm³
 - ☐ 4. 2153.76 cm³

Question ID : 26433065016
Status : Answered
Chosen Option : 2

Q.7 A policeman starts to chase a thief. When the thief goes 12 steps, the policeman moves 9 steps. 6 steps of the policeman is equal to 9 steps of the thief. The ratio of the speed of the thief to that of the policeman is:

- Ans
- ☐ 1. 3 : 2
 - ☐ 2. 2 : 3
 - ☐ 3. 9 : 8
 - ☒ 4. 8 : 9

Question ID : 26433056332
Status : Answered
Chosen Option : 4

Q.8 If 5 kg of salt costing Rs. 21 per kg and 3 kg of salt costing Rs. 25 per kg are mixed, then what is the average cost of the resulting mixture per kilogram?

- Ans
- ☐ 1. Rs. 23.5
 - ☐ 2. Rs. 21.5
 - ☒ 3. Rs. 22.5
 - ☐ 4. Rs. 24.0

Question ID : 26433073080
Status : Answered
Chosen Option : 3

Q.9 A store dealer sells an article, whose marked price is ₹7,200. The cost price of the article is 70% below the marked price. Two successive equal discounts of 25% and 25% are offered to a customer. The customer gets a further 18% discount on his net payment, if the customer redeems a coupon issued by the store previously to celebrate the store's 5th Anniversary. What is the profit percentage (to the nearest integer) earned by the dealer in this transaction?

- Ans
- ☐ 1. 58%
 - ☐ 2. 68%
 - ☐ 3. 64%
 - ☒ 4. 54%

Question ID : 26433061894
Status : Answered
Chosen Option : 2

Q.10 6 men and 4 boys can finish a work in 20 days, and the same is finished in 24 days by 4 men and 6 boys. In how many days can 2 boys and 1 man finish the work?

- Ans
- ☐ 1. 75.8
 - ☐ 2. 78.5
 - ☒ 3. 85.7
 - ☐ 4. 87.5

Question ID : 26433071265
Status : Answered
Chosen Option : 3

Section : Part-D-Road Sense, Vehicle Maintenance, Traffic Rules/Signals Vehicle and Environmental Pollution

Q.1 In a car, leaf springs are curved and the curvature helps the spring absorb_____.

- Ans
- ☐ 1. tension
 - ☐ 2. compression
 - ☐ 3. twisting
 - ☒ 4. impact

Question ID : 26433097925
Status : Answered
Chosen Option : 2

Q.2 What is the ambient Air Quality Standards in respect of Noise in residential area in day time?

- Ans
- ☐ 1. 45 dB(A) Leq
 - ☐ 2. 75 dB(A) Leq
 - ☒ 3. 55 dB(A) Leq
 - ☐ 4. 65 dB(A) Leq

Question ID : 26433097978
Status : Answered
Chosen Option : 3

Q.3 Which of the following is NOT a component of transmission system in a vehicle?

- Ans
- ☒ 1. Carburettor
 - ☐ 2. Propeller shaft
 - ☐ 3. Clutch assembly
 - ☐ 4. Gear box assembly

Question ID : 26433098019
Status : Answered
Chosen Option : 1

Q.4 Which of the following is a safety rule to be followed during servicing of a vehicle?

- Ans
- ☐ 1. Place a jack in a slipping position
 - ☐ 2. Work with lower concentration
 - ☐ 3. Use inapt tools
 - ☒ 4. Wipe excess oil and grease off hands

Question ID : 26433098009
Status : Answered
Chosen Option : 4

Q.5 In India, the first two digits of the license show the code for the _____ in which the license was issued.

- Ans
- ☐ 1. district
 - ☐ 2. Tehsil
 - ☐ 3. RTO
 - ☒ 4. state

Question ID : 26433098067
Status : Answered
Chosen Option : 3

Q.6 Which of the following is not a part of transmission system of a vehicle?

- Ans
- ☐ 1. Clutch assembly
 - ☒ 2. Crank shaft
 - ☐ 3. Gear box assembly
 - ☐ 4. Propeller shaft

Question ID : 26433098074
Status : Answered
Chosen Option : 2

Q.7 Which section of Motor Vehicle Act, 1988 is related with Necessity for insurance against third party risk?

- Ans
- ☐ 1. 132
 - ☒ 2. 146
 - ☐ 3. 158
 - ☐ 4. 149

Question ID : 26433097982
Status : Answered
Chosen Option : 2

Q.8 Which of the following suggestion helps in better maintenance of a vehicle, and must be observed in day-to-day life?

- Ans**
- ☐ 1. Proper tyre pressure is not necessary
 - ☒ 2. Keep the AC functional, even occasionally during winters
 - ☐ 3. Always use mixed coolants
 - ☐ 4. Drive the car even if there is no brake fluid

Question ID : 26433097994
Status : Answered
Chosen Option : 3

Q.9 Which of the following is NOT a correct way of parking?

- Ans**
- ☐ 1. Always look for authorized parking
 - ☐ 2. Respect no parking zones on the road
 - ☐ 3. Always use your indicators while parking
 - ☒ 4. Opt for perpendicular parking

Question ID : 26433098052
Status : Answered
Chosen Option : 4

Q.10 In petrol engines, the fuel and air mixture is supplied to the combustion chamber of an engine. This mixture is atomised and then vapourised by the _____.

- Ans**
- ☐ 1. injector
 - ☒ 2. carburettor
 - ☐ 3. air cleaner
 - ☐ 4. fuel pump

Question ID : 26433098027
Status : Answered
Chosen Option : 2

Q.11 Instant and proper first aid given to the road crash victims during the golden hour increase the chance of survival manifold and reduces the severity of injuries. The _____ hour after the trauma is called the golden hour.

- Ans**
- ☐ 1. second
 - ☒ 2. first
 - ☐ 3. third
 - ☐ 4. zero

Question ID : 26433097986
Status : Answered
Chosen Option : 2

Q.12 If a vehicle does not have a valid PUC certificate, then its owner is liable to be prosecuted under Section _____ of the Motor Vehicles Act.

- Ans**
- ☒ 1. 179(2)
 - ☒ 2. 190(2)
 - ☒ 3. 182(2)
 - ☒ 4. 178(2)

Question ID : 26433097908
Status : Answered
Chosen Option : 2

Q.13 Which of the following is a requirement for the body of a motor vehicle?

- Ans**
- ☒ 1. Uniformly distributed load
 - ☒ 2. Sufficient space for passengers and luggage
 - ☒ 3. Short fatigue life
 - ☒ 4. Be light weight

Question ID : 26433097989
Status : Answered
Chosen Option : 2

Q.14 Which is the part of steering system?

- Ans**
- ☒ 1. Wheel
 - ☒ 2. Drop arm
 - ☒ 3. Universal joint
 - ☒ 4. Ball bearing

Question ID : 26433098076
Status : Answered
Chosen Option : 4

Q.15 In the job card the customer authorization form must have the signature of the _____.

- Ans**
- ☒ 1. supervisor
 - ☒ 2. mechanic
 - ☒ 3. manager
 - ☒ 4. customer

Question ID : 26433097912
Status : Not Answered
Chosen Option : --

Q.16 In IC engines, the major function of the connecting rod is to convert the reciprocating motion of the piston into the rotary motion of the _____.

- Ans**
- ☒ 1. cam shaft
 - ☒ 2. crankshaft
 - ☒ 3. propeller shaft
 - ☒ 4. lay shaft

Question ID : 26433097920
Status : Answered
Chosen Option : 3

Q.17 Which is not poisonous gas?

- Ans**
- ☒ 1. CO
 - ☒ 2. NOx
 - ☒ 3. Ozone
 - ☒ 4. O₂

Question ID : 26433098038
Status : Answered
Chosen Option : 4

Q.18 In a vehicle, alternator is the part of _____.

- Ans**
- ☒ 1. lighting system
 - ☒ 2. ignition system
 - ☒ 3. steering system
 - ☒ 4. charging system

Question ID : 26433098072
Status : Answered
Chosen Option : 4

Q.19



This sign indicates which of the following?

- Ans**
- ☒ 1. Stop
 - ☒ 2. No Parking
 - ☒ 3. No Entry
 - ☒ 4. Give away

Question ID : 26433097999
Status : Answered
Chosen Option : 2

Q.20 A license to drive a motor vehicle other than a transport vehicle can be issued to a person who has completed _____ years of age.

- Ans**
- ✓ 1. 18
 - ✗ 2. 20
 - ✗ 3. 19
 - ✗ 4. 21

Question ID : 26433097918
Status : Answered
Chosen Option : 1

Q.21 _____ light in the dashboard is also called check engine light, that indicates a problem with the car.

- Ans**
- ✗ 1. A/T P
 - ✗ 2. EPS
 - ✓ 3. MIL
 - ✗ 4. SRS

Question ID : 26433097893
Status : Answered
Chosen Option : 2

Q.22 Driving a vehicle without valid registration shall be punishable for the first offence with a fine which may extend to _____ rupees but shall not be less than 2000 rupees.

- Ans**
- ✗ 1. 4000
 - ✗ 2. 8000
 - ✗ 3. 6000
 - ✓ 4. 5000

Question ID : 26433098002
Status : Answered
Chosen Option : 1

Q.23 Name of component given below.



- Ans**
- ✗ 1. Glow plug
 - ✗ 2. Electrical plug
 - ✗ 3. Sink plug
 - ✓ 4. Spark plug

Question ID : 26433098042
Status : Answered
Chosen Option : 4

Q.24 In a petrol engine, the carburetor is mounted on the _____ .

- Ans
- ☐ 1. air filter
 - ☐ 2. exhaust manifold
 - ☐ 3. silencer
 - ☒ 4. induction manifold

Question ID : 26433098063
Status : Answered
Chosen Option : 4

Q.25 The muffler is a device that absorbs and dampens _____ gases introduced into the exhaust system when the exhaust valve is opened.

- Ans
- ☒ 1. high pressure
 - ☐ 2. very low pressure
 - ☐ 3. low pressure
 - ☐ 4. medium pressure

Question ID : 26433097991
Status : Answered
Chosen Option : 1

Q.26 In which year were the BS VI emission norms implemented in India?

- Ans
- ☒ 1. 2012
 - ☐ 2. 2021
 - ☐ 3. 2014
 - ☐ 4. 2020

Question ID : 26433098054
Status : Answered
Chosen Option : 4

Q.27 _____ which helps the clutch to reduce effective load on the carbon thrust bearing and its wear.

- Ans
- ☒ 1. Free pedal play
 - ☐ 2. Gradual engagement
 - ☐ 3. Vibration damping
 - ☐ 4. Dynamic balancing

Question ID : 26433098031
Status : Answered
Chosen Option : 2

Q.28 As the exhaust passes through the catalytic converter, unburnt hydrocarbons are converted into _____.

- Ans**
- ☒ 1. nitrogen oxide and water
 - ☒ 2. carbon dioxide and water
 - ☒ 3. carbon and NOx
 - ☒ 4. carbon and oxygen

Question ID : **26433098007**
Status : **Answered**
Chosen Option : **2**

Q.29 In a car's air conditioning system, the compressor is driven by the _____ through a belt drive.

- Ans**
- ☒ 1. engine
 - ☒ 2. distributor
 - ☒ 3. battery
 - ☒ 4. dynamo

Question ID : **26433097929**
Status : **Answered**
Chosen Option : **4**

Q.30 Transport and commercial vehicle driver must carry _____ and vehicle fitness certificate also along with DL, RC, PUC.

- Ans**
- ☒ 1. passport
 - ☒ 2. permit
 - ☒ 3. medical
 - ☒ 4. visa

Question ID : **26433097985**
Status : **Answered**
Chosen Option : **2**

Q.31 India is a _____ country.

- Ans**
- ☒ 1. both hand drive
 - ☒ 2. right hand drive
 - ☒ 3. middle hand drive
 - ☒ 4. left hand drive

Question ID : **26433097940**
Status : **Answered**
Chosen Option : **4**

Q.32 Which of the following is NOT a function of a gear box?

Ans ☒ 1.

To provide a means to vary the leverage or torque ratio between the engine and the road wheels as required

☒ 2.

It provides a means to reverse the car by selecting the reverse gear

☒ 3.

provides a neutral position so that the engine and the road wheels are disconnected even with the clutch in the engaged position

☒ 4. Provides a means to reduce the wear and tear of the tyres

Question ID : 26433098073

Status : Answered

Chosen Option : 1

Q.33 The following sign represents.



Ans ☒ 1. Hotel

☒ 2. Dangerous zone

☒ 3. Hospital

☒ 4. First aid post

Question ID : 26433098046

Status : Answered

Chosen Option : 4

Q.34 Section 14 of The Motor Vehicles Act, 1988 is related with _____.

Ans ☒ 1. Effectiveness in India of registration

☒ 2. Effect of disqualification order

☒ 3. Currency of licences to drive motor vehicles

☒ 4. Necessity for registration

Question ID : 26433098003

Status : Answered

Chosen Option : 2

Q.35 Which of the following is NOT involved in road safety?

- Ans**
- ☐ 1. Systems of traffic safety and control
 - ☐ 2. Design of roads and highways
 - ☒ 3. Authority where vehicle is registered
 - ☐ 4. Driver education

Question ID : 26433097987
Status : Answered
Chosen Option : 3

Q.36 Leakage of _____ can affect engine temperature and cause overheating, which can damage parts.

- Ans**
- ☐ 1. lubricating oil
 - ☒ 2. coolant
 - ☐ 3. combustible gases
 - ☐ 4. gear oil

Question ID : 26433097930
Status : Answered
Chosen Option : 2

Q.37 A vehicle having a white license plate with black letters means that it is a _____ vehicle.

- Ans**
- ☐ 1. Transport
 - ☒ 2. Private
 - ☐ 3. Electric
 - ☐ 4. Military

Question ID : 26433097915
Status : Answered
Chosen Option : 2

Q.38 Cold temperatures _____ the air pressure in tyres while in summers heat _____ the pressure in tyres.

- Ans**
- ☐ 1. increase, decrease
 - ☐ 2. decrease, decrease
 - ☒ 3. decrease, increase
 - ☐ 4. increase, increase

Question ID : 26433097910
Status : Answered
Chosen Option : 3

Q.39 What is the colour of stop sign?

- Ans
- ☒ 1. Yellow
 - ☒ 2. Red
 - ☒ 3. Green
 - ☒ 4. Blue

Question ID : 26433097954
Status : Answered
Chosen Option : 2

Q.40 In the new BH series number plates, the first two digits indicate _____.

- Ans
- ☒ 1. Last two digit of the year of manufacturing.
 - ☒ 2. First two digit of engine no. of vehicle
 - ☒ 3. Last two digit of the year of registration
 - ☒ 4. First two digit of chassis no. of vehicle

Question ID : 26433098015
Status : Answered
Chosen Option : 3

Q.41 Transport Vehicle License is valid for a period of _____ years from the date of issue or renewal.

- Ans
- ☒ 1. 3
 - ☒ 2. 5
 - ☒ 3. 4
 - ☒ 4. 6

Question ID : 26433098000
Status : Answered
Chosen Option : 2

Q.42 In an IC engine, the reciprocating motion of the piston is converted into the rotary motion of the _____.

- Ans
- ☒ 1. crankshaft
 - ☒ 2. camshaft
 - ☒ 3. distributor
 - ☒ 4. connecting rod

Question ID : 26433098021
Status : Answered
Chosen Option : 2

Q.43 In case of double overhead camshaft engine, the double row valves are usually operated by the separate overhead _____.

- Ans**
- ☐ 1. valve guide
 - ☐ 2. rocker arm
 - ☒ 3. camshaft
 - ☐ 4. crankshaft

Question ID : 26433098061
Status : Answered
Chosen Option : 4

Q.44 Care and maintenance keep a vehicle running in good condition. Which of the following is not a suggestion that helps in better maintenance of the vehicle?

- Ans**
- ☐ 1. Always carry more than designated load
 - ☐ 2. Car keychain should be heaviest
 - ☐ 3. Never rotate your tyres
 - ☒ 4. Maintain your car's battery

Question ID : 26433097966
Status : Answered
Chosen Option : 1

Q.45 _____ lines are used where visibility is restricted in both directions. Neither stream of traffic is allowed to cross the lines.

- Ans**
- ☐ 1. Double broken
 - ☐ 2. Single broken
 - ☒ 3. Double continuous
 - ☐ 4. Single continuous

Question ID : 26433097984
Status : Answered
Chosen Option : 3

Q.46 The driver of the vehicle in front has not given signal for over taking, then _____.

- Ans**
- ☐ 1. we can overtake without any sign
 - ☒ 2. we shall not overtake
 - ☐ 3. we can overtake
 - ☐ 4. we can overtake blowing horn

Question ID : 26433097948
Status : Answered
Chosen Option : 2

Q.47



What does this sign indicate?

- Ans
- ☒ 1. Load Limit
 - ☒ 2. Speed Limit
 - ☒ 3. Width Limit
 - ☒ 4. Height Limit

Question ID : 26433097896

Status : Answered

Chosen Option : 2

Q.48 This sign means



- Ans
- ☒ 1. Left hand turn
 - ☒ 2. Right hand turn
 - ☒ 3. Right hair pin bend
 - ☒ 4. Steep ahead

Question ID : 26433097956

Status : Answered

Chosen Option : 3

Q.49 Apply high quality _____ as it gives your car a shine, protects the car paint from sun damage from ultraviolet radiation.

- Ans
- ☒ 1. wax
 - ☒ 2. oil
 - ☒ 3. paint
 - ☒ 4. coolant

Question ID : 26433097895

Status : Answered

Chosen Option : 1

Q.50 The function of the _____ is to generate a spark in the engine combustion chamber at the end of the compression stroke.

- Ans**
- ✓ 1. ignition system
 - ✗ 2. lighting system
 - ✗ 3. starting system
 - ✗ 4. charging system

Question ID : **26433098083**

Status : **Answered**

Chosen Option : **1**



Teachingninja.in