



# Teachingninja.in



**Latest Govt Job updates**



**Private Job updates**



**Free Mock tests available**



**Visit - [teachingninja.in](https://teachingninja.in)**



# **Delhi Police Head Constable**

**Previous Year Paper  
(Ministerial) 10 Oct 2022  
Shift 1**



Head Constable Ministerial in Delhi Police Examination 2022

Roll Number	
Candidate Name	
Venue Name	
Exam Date	10/10/2022
Exam Time	9:00 AM - 10:30 AM
Subject	Head Constable Ministerial in Delhi Police Examination 2022

Section : Part-A-General Awareness

Q.1 As per CMIE data, in March 2022, what is the urban unemployment rate in India?

- Ans
- ☒ 1. 8.27%
  - ☒ 2. 8.88%
  - ☒ 3. 8.22%
  - ☒ 4. 8.28%

Question ID : 26433067223  
Status : Not Answered  
Chosen Option : --

Q.2 The 11<sup>th</sup> edition of the Khel Mahakumbh was inaugurated at the Sardar Patel Stadium in Ahmedabad in March 2022, by \_\_\_\_\_.

- Ans
- ☒ 1. Acharya Devvrat
  - ☒ 2. Kirit Kumar Parmar
  - ☒ 3. Narendra Modi
  - ☒ 4. Harsh Sanghvi

Question ID : 26433055063  
Status : Not Answered  
Chosen Option : --

Q.3 Kalyani Amma is famously associated with:

- Ans
- ☒ 1. Manipuri
  - ☒ 2. Kathak
  - ☒ 3. Mohiniyattam
  - ☒ 4. Kathakali

Question ID : 26433066535  
Status : Not Answered  
Chosen Option : --

Q.4 Which of the following is NOT an objective of micro finance institutions in India?

- Ans
- ☒ 1. Poverty alleviation
  - ☒ 2. Improvement of living standards
  - ☒ 3. Improvement of the credit score of the poor
  - ☒ 4. Promotion of financial inclusion

Q.5 Which place in India is famed for the celebration of Dev Deepawali?

- Ans
- ☐ 1. Ganganagar
  - ☐ 2. Patna
  - ☐ 3. Haridwar
  - ☒ 4. Varanasi

Question ID : 26433064393  
Status : Not Answered  
Chosen Option : --

Q.6 When, for the first time in independent India, did the government announce three annual plans called Plan Holidays?

- Ans
- ☐ 1. 1965 to 1968
  - ☐ 2. 1968 to 1971
  - ☐ 3. 1967 to 1970
  - ☒ 4. 1966 to 1969

Question ID : 26433064510  
Status : Answered  
Chosen Option : 1

Q.7 What is the percentage of the source of lighting through electricity for households in India as per the 2011 Census?

- Ans
- ☐ 1. 66.2%
  - ☐ 2. 62.7%
  - ☒ 3. 67.2%
  - ☐ 4. 69.8%

Question ID : 26433071577  
Status : Not Answered  
Chosen Option : --

Q.8 Which organisation conducted the Young Scientist Programme 'YUVIKA-2022' for students?

- Ans
- ☒ 1. Indian Space Research Organisation (ISRO)
  - ☐ 2. Council of Scientific and Industrial Research (CSIR)
  - ☐ 3. Defence Research and Development Organisation (DRDO)
  - ☐ 4. Indian Council of Medical Research (ICMR)

Question ID : 26433055044  
Status : Not Answered  
Chosen Option : --

Q.9 Where was the Supreme Court established under the Charter of 1774?

- Ans
- ☒ 1. Calcutta
  - ☐ 2. Madras
  - ☐ 3. Shimla
  - ☐ 4. Bombay

Question ID : 26433065578  
Status : Answered  
Chosen Option : 1

Q.10 Jahaz Mahal, built by Sultan Ghiyas-ud-din Khilji, is located in \_\_\_\_\_.

Ans ☒ 1. Madhya Pradesh

☐ 2. Telangana

☐ 3. Gujarat

☐ 4. Rajasthan

Question ID : 26433064366

Status : Not Answered

Chosen Option : --

Q.11 Which of the following is NOT correct about the Constitution of India?

Ans ☐ 1. It reflects the historical, social, political and economic conditions of the Indian people.

☐ 2. It is a document of social relevance.

☐ 3. It suits the requirement of India.

☒ 4. The original Constitution contained 395 Articles in 25 parts and 12 schedules.

Question ID : 26433054070

Status : Not Answered

Chosen Option : --

Q.12 Who among the following became the first President of the Indian National Congress in 1885?

Ans ☐ 1. Dadabhai Naoriji

☒ 2. Womesh Chandra Bonnerjee

☐ 3. Gopal Krishna Gokhale

☐ 4. Pherozeshah Mehta

Question ID : 26433065556

Status : Answered

Chosen Option : 2

Q.13 This state of matter is made up of ionised gas, which consists of a balanced mix of electrons, positive ions and neutral particles. What is it?

Ans ☐ 1. Liquid

☐ 2. Gas

☐ 3. Fog

☒ 4. Plasma

Question ID : 26433095245

Status : Answered

Chosen Option : 2

Q.14 Which of the following IITs has developed a Solar-powered Unmanned Autonomous Survey Craft for Indian Ports and Inland Waterways?

Ans ☐ 1. IIT Bangalore

☒ 2. IIT Madras

☐ 3. IIT Delhi

☐ 4. IIT Roorkee

Question ID : 26433095262

Status : Not Answered

Chosen Option : --

Q.15 Who has been appointed as the chairperson of the National Human Rights Commission (NHRC) in April 2021?

- Ans
- ☒ 1. J.S. Verma
  - ☒ 2. H.L. Dattu
  - ☒ 3. Dipak Mishra
  - ☒ 4. Arun Kumar Mishra

Question ID : 26433055567  
Status : Not Answered  
Chosen Option : --

Q.16 When was the Microfinance Institutions Network (MFIN) recognised by the Reserve Bank of India (RBI) as India's first Self-Regulatory Organisation (SRO) for the Nonbank Financial Company – Microfinance Institutions (NBFC-MFIs)?

- Ans
- ☒ 1. 2016
  - ☒ 2. 2009
  - ☒ 3. 2012
  - ☒ 4. 2014

Question ID : 26433064490  
Status : Not Answered  
Chosen Option : --

Q.17 Union Education Minister and Skill Development Minister Dharmendra Pradhan launched\_\_\_\_\_, a single platform to provide the best-developed ed-tech solutions and courses to students of the country.

- Ans
- ☒ 1. AICTE 3.0
  - ☒ 2. NEAT 2.0
  - ☒ 3. NEAT 3.0
  - ☒ 4. AICTE 2.0

Question ID : 26433055030  
Status : Not Answered  
Chosen Option : --

Q.18 Babur wrote Tuzuk-i-Baburi in which of the following language?

- Ans
- ☒ 1. Afghani
  - ☒ 2. Urdu
  - ☒ 3. Turkish
  - ☒ 4. Persian

Question ID : 26433095226  
Status : Answered  
Chosen Option : 1

Q.19 Social forestry means the management and protection of forests. Which of the following is NOT a category of social forestry?

- Ans
- ☒ 1. Farm Forestry
  - ☒ 2. Rural forestry
  - ☒ 3. Tribal Forestry
  - ☒ 4. Urban forestry

Question ID : 26433064101  
Status : Not Answered  
Chosen Option : --

Q.20 The total literacy rate of the state of \_\_\_\_ was the lowest, according to the 2011 census.

- Ans
- ☐ 1. Rajasthan
  - ☐ 2. Jharkhand
  - ☐ 3. Uttar Pradesh
  - ☒ 4. Bihar

Question ID : 26433055339

Status : Answered

Chosen Option : 1

Section : Part-B-Quantitative Aptitude

Q.1 A cylindrical tank having an internal radius 14 m, contains water up to the depth of 10 m. What is the total area of the wet surface?

(Use  $\pi = \frac{22}{7}$ .)

- Ans
- ☒ 1. 1496 m<sup>2</sup>
  - ☐ 2. 1492 m<sup>2</sup>
  - ☐ 3. 1494 m<sup>2</sup>
  - ☐ 4. 1498 m<sup>2</sup>

Question ID : 26433061428

Status : Answered

Chosen Option : 1

Q.2 In a  $\Delta PQR$ ,  $PQ = PR$ , and S is a point on PQ, such that  $PS = RS = QR$ . Then what is the measure of  $\angle QPR$ ?

- Ans
- ☐ 1. 60°
  - ☐ 2. 72°
  - ☐ 3. 23°
  - ☒ 4. 36°

Question ID : 26433075362

Status : Answered

Chosen Option : 4

Q.3 A conical shaped cup, when filled with ice-cream, forms into the shape of a hemisphere at its open end. What is the volume of the ice cream, if the radius of the base of the cone is 3 cm and the vertical height of the cone is 7 cm?

- Ans
- ☐ 1.  $\frac{2754}{21} \text{ cm}^3$
  - ☒ 2.  $\frac{2574}{21} \text{ cm}^3$
  - ☐ 3.  $\frac{2504}{21} \text{ cm}^3$
  - ☐ 4.  $\frac{2547}{21} \text{ cm}^3$

Question ID : 26433058159

Status : Answered

Chosen Option : 2

Q.4 One boy and one girl together can complete a piece of work in 12 days. A boy alone can complete the work in 15 days. In how many days can one girl alone complete the work?

- Ans
- ☒ 1. 70 days
  - ☒ 2. 60 days
  - ☒ 3. 50 days
  - ☒ 4. 44 days

Question ID : 26433063496  
Status : Answered  
Chosen Option : 2

Q.5 In a race, a cyclist covers a distance of 500 m in 625 sec in the first lap. He covers the second lap of the same length in 375 sec. What is the average speed (in m/sec) of the cyclist?

- Ans
- ☒ 1. 10
  - ☒ 2. 1
  - ☒ 3. 5
  - ☒ 4. 3

Question ID : 26433058237  
Status : Answered  
Chosen Option : 2

Q.6 Find the average of the first 20 multiples of 9.

- Ans
- ☒ 1. 94.5
  - ☒ 2. 21.5
  - ☒ 3. 189
  - ☒ 4. 180

Question ID : 26433072994  
Status : Answered  
Chosen Option : 1

Q.7 If  $\frac{1}{x} + \frac{1}{y} + \frac{1}{z} = 1$ , then  $\left(\frac{1}{z-1}\right)\left(\frac{1}{x} + \frac{1}{y}\right) + \left(\frac{1}{y-1}\right)\left(\frac{1}{x} + \frac{1}{z}\right) + \left(\frac{1}{x-1}\right)\left(\frac{1}{y} + \frac{1}{z}\right) = ?$

- Ans
- ☒ 1. -1
  - ☒ 2. 1
  - ☒ 3. 2
  - ☒ 4. 0

Question ID : 26433061630  
Status : Not Answered  
Chosen Option : --

Q.8 Choose the INCORRECT statement.

- Ans
- ☒ 1. LCM of 3 and 5 is 15.
  - ☒ 2. LCM of 8 and 7 is 1.
  - ☒ 3. LCM of 12 and 15 is 60.
  - ☒ 4. LCM of 14 and 7 is 14.

Question ID : 26433063278  
Status : Answered  
Chosen Option : 2



Q.9 Simplify the following

$$6\frac{2}{7} \text{ of } 2\frac{6}{11} \times \frac{1}{4} + \left\{ 25 \div 5 \times \frac{3}{5} \right\}$$

Ans ☒ 1. 7

☐ 2. 9

☐ 3. 5

☐ 4. 10

Question ID : 26433058392

Status : Answered

Chosen Option : 1

Q.10 What is the value of the expression  $(1 + y)(1 + y^2)(1 + y^4)(1 + y^8)(1 - y)$ ?

Ans ☒ 1.  $1 - y^{16}$

☐ 2.  $1 - y^{40}$

☐ 3.  $1 - y^{32}$

☐ 4.  $1 - y^{42}$

Question ID : 26433061111

Status : Answered

Chosen Option : 1

Q.11 The value of  $2.\overline{13} \div 3.\overline{12}$  is:

Ans ☐ 1.  $\frac{249}{309}$

☒ 2.  $\frac{211}{309}$

☐ 3.  $\frac{301}{309}$

☐ 4.  $\frac{239}{309}$

Question ID : 26433079835

Status : Answered

Chosen Option : 2

Q.12 Ranjan purchased a bicycle for Rs.5,000 and paid Rs.250 for its transportation. If he sells the bicycle for Rs.5,075, find his profit or loss percentage.

Ans ☐ 1. Loss of 1.75%

☒ 2. Loss of 3.33%

☐ 3. Loss of 33.3%

☐ 4. Profit of 3.33%

Question ID : 26433058132

Status : Answered

Chosen Option : 2

Q.13 A sum of money after a period of 2 years becomes Rs.34,560, and it becomes Rs.41,472 after a period of three years, being compounded at 'R' rate of interest. What is the value of R?

- Ans
- ☒ 1. 12%
  - ☒ 2. 20%
  - ☒ 3. 10%
  - ☒ 4. 25%

Question ID : 26433058235  
Status : Not Answered  
Chosen Option : --

Q.14 A dealer purchased a water cooler for ₹5,800. He allows a discount of 12% on its marked price and still gains 10%. Find the marked price of the water cooler.

- Ans
- ☒ 1. ₹6,880
  - ☒ 2. ₹7,280
  - ☒ 3. ₹7,250
  - ☒ 4. ₹7,220

Question ID : 26433074282  
Status : Not Answered  
Chosen Option : --

Q.15 Find the fourth proportional to 19, 23 and 38.

- Ans
- ☒ 1. 24
  - ☒ 2. 42
  - ☒ 3. 46
  - ☒ 4. 28

Question ID : 26433061151  
Status : Answered  
Chosen Option : 3

Q.16 If the price of a leather bag is increased by 15%, and then decreased by 15%, what will be the net percentage decrease in its price?

- Ans
- ☒ 1. 2.30%
  - ☒ 2. 3.30%
  - ☒ 3. 3.25%
  - ☒ 4. 2.25%

Question ID : 26433061399  
Status : Answered  
Chosen Option : 4

Q.17 Kiran, Vishal and Dinesh work in a juice factory. Kiran takes 2 hours to extract as much juice as Vishal can in 3 hours. Dinesh takes 5 hours to extract as much juice that Kiran extracts in 4 hours. A tank can be filled with juice in 48 hours, if all of them work together. How long will it take to fill the tank, if Dinesh alone is trying to fill the tank?

- Ans
- ☐ 1. 132 hours
  - ☐ 2. 135 hours
  - ☒ 3. 148 hours
  - ☐ 4. 140 hours

Question ID : 26433061320  
Status : Not Answered  
Chosen Option : --

Q.18 If  $\sec A + \tan A = 5$ , then  $\sec A - \tan A = ?$

- Ans
- ☐ 1.  $\frac{2}{5}$
  - ☐ 2.  $\frac{5}{2}$
  - ☐ 3. 5
  - ☒ 4.  $\frac{1}{5}$

Question ID : 26433056888  
Status : Answered  
Chosen Option : 4

Q.19 Annual production of four different types of chocolates has been tabulated in the following table. Which of these chocolates has encountered minimum percentage increment in production?

Chocolates	2010	2011
A	720000	780000
B	850000	880000
C	690000	740000
D	580000	670000

- Ans
- ☐ 1. C
  - ☐ 2. A
  - ☐ 3. D
  - ☒ 4. B

Question ID : 26433074320  
Status : Answered  
Chosen Option : 4

Q.20 In how many years will ₹1,900 produce an interest of ₹798 at the rate of 7% simple interest per annum?

- Ans
- ☐ 1. 5
  - ☒ 2. 6
  - ☐ 3. 9
  - ☐ 4. 8

Question ID : 26433061901  
Status : Answered  
Chosen Option : 2

Q.1 Four letter-clusters have been given out of which three are alike in some manner and one is different. Select the one that is different.

- Ans ☒ 1. SVX  
☒ 2. FIK  
☒ 3. BDG  
☒ 4. LOQ

Question ID : 26433068500  
Status : Answered  
Chosen Option : 3

Q.2 Six friends - P,Q,R,S,T and U - are sitting around a circular table, facing towards the centre of the table.  
S is an immediate neighbour of P and T.Q is second to the left of S. If R is an immediate neighbour of P, where is U sitting?

- Ans ☒ 1. Second to the left of T  
☒ 2. Third to the right of P  
☒ 3. Immediate left of R  
☒ 4. Immediate right of Q

Question ID : 26433068812  
Status : Answered  
Chosen Option : 1

Q.3 In a code language, 'WRITE' is coded as D60X and 'APPLE' is coded as D35B. How will 'BASIS' be coded in the same language?

- Ans ☒ 1. T37A  
☒ 2. T35A  
☒ 3. R35C  
☒ 4. R37C

Question ID : 26433057828  
Status : Answered  
Chosen Option : 3

Q.4 Select the number from among the given options that can replace the question mark (?) in the following series.  
51, 46, 40, 33, 25, ?

- Ans ☒ 1. 16  
☒ 2. 10  
☒ 3. 20  
☒ 4. 11

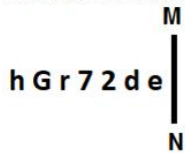
Question ID : 26433057783  
Status : Answered  
Chosen Option : 1

Q.5 Pointing to the photo, Neha said, "This woman is the wife of my father's paternal grandfather's only son." How is girl in the photo related to the Neha?

- Ans ☒ 1. Father's Mother  
☒ 2. Father's Sister  
☒ 3. Sister  
☒ 4. Mother

Question ID : 26433057701  
Status : Answered  
Chosen Option : 4

Q.6 Select the correct mirror image of the given figure when the mirror is placed at MN as shown below.



- Ans
- ✓ 1.
  - ✗ 2.
  - ✗ 3.
  - ✗ 4.

Question ID : 26433056976  
Status : Answered  
Chosen Option : 1

Q.7 Select the correct combination of mathematical signs to sequentially replace the \* signs and to balance the given equation.  
 $23 * 8 * 4 * 321 * 87 * 280$

- Ans
- ✗ 1. +, -, ×, ÷, =
  - ✓ 2. ×, ÷, +, -, =
  - ✗ 3. ×, +, -, ÷, =
  - ✗ 4. +, ×, -, ÷, =

Question ID : 26433056451  
Status : Answered  
Chosen Option : 2

Q.8 Select the set in which the numbers are related in the same way as are the numbers of the following set.  
(NOTE: Operations should be performed on the whole numbers, without breaking down the numbers into its constituent digits. E.g., 13 – Operations on 13 such as adding /deleting /multiplying etc. to 13 can be performed. Breaking down 13 into 1 and 3 and then performing mathematical operations on 1 and 3 is NOT allowed).  
(6, 15, 18)  
(7, 35, 49)

- Ans
- ✗ 1. (44, 6, 51)
  - ✗ 2. (4, 34, 29)
  - ✓ 3. (8, 65, 104)
  - ✗ 4. (25, 7, 40)

Question ID : 26433074771  
Status : Not Answered  
Chosen Option : --

Q.9 Select the correct combination of mathematical signs to sequentially replace the \* signs and to balance the given equation.  
 $572 * 4 * 64 * 365 * 41 * 27 = 441 * 380$

- Ans
- ✗ 1. ÷, +, -, ×, +, -
  - ✗ 2. ÷, -, +, -, ×, +
  - ✗ 3. +, ÷, -, ×, -, +
  - ✓ 4. ÷, -, -, +, ×, +

Question ID : 26433056525  
Status : Answered  
Chosen Option : 4

Q.10 Which of the following options represents the correct order of the given words as they would appear in the English dictionary?

- 1. Pickle
- 2. Picador
- 3. Picnic
- 4. Pickaxe
- 5. Piccolo

Ans ☒ 1. 5,2,4,3,1  
☒ 2. 2,4,5,1,3  
☒ 3. 5,2,1,4,3  
☒ 4. 2,5,4,1,3

Question ID : 26433068768  
Status : Answered  
Chosen Option : 4

Q.11 Select the option that is related to the fifth word in the same way as the second word is related to the first word and the fourth word is related to the third word.  
(The words must be considered as meaningful English words and must not be related to each other based on the number of letters/number of consonants/vowels in the word)  
Horse: Stable :: Bee: Beehive :: Lion: ?

Ans ☒ 1. Den  
☒ 2. Cage  
☒ 3. Farm  
☒ 4. Sty

Question ID : 26433056383  
Status : Answered  
Chosen Option : 1

Q.12 Eight people are sitting in two parallel rows containing four people each in such a way that there is equal distance between adjacent persons.  
In the first row, P, Q, R and S are seated and all of them are facing the south.  
In the second row, U, V, W and X are seated and all of them are facing the north.  
Thus, each person faces another person from the other row.  
X is sitting third to the right of U. The person facing W is the immediate neighbour of R. P is sitting third to the right of R. The person facing Q is the immediate neighbour of U. S is sitting second to the left of P.  
Who amongst the following faces U?

Ans ☒ 1. Q  
☒ 2. P  
☒ 3. S  
☒ 4. R

Question ID : 26433080717  
Status : Answered  
Chosen Option : 2

Q.13 Select the set in which the numbers are related in the same way as are the numbers of the following sets.

(NOTE: Operations should be performed on the whole numbers, without breaking down the numbers into its constituent digits. E.g. 13 – Operations on 13 such as adding/deleting/multiplying etc. to 13 can be performed. Breaking down 13 into 1 and 3 and then performing mathematical operations on 1 and 3 is not allowed)

(64, 12, 4)

(128, 19, 3)

Ans ☒ 1. (72, 21, 11)

☒ 2. (70, 21, 12)

☒ 3. (72, 21, 12)

☒ 4. (72, 20, 12)

Question ID : 26433068663

Status : Not Answered

Chosen Option : --

Q.14 In a certain code language, 'BIKE' is written as '23' and 'RIDE' is written as '32'. How will 'NICE' be written in that language?

Ans ☒ 1. 28

☒ 2. 26

☒ 3. 27

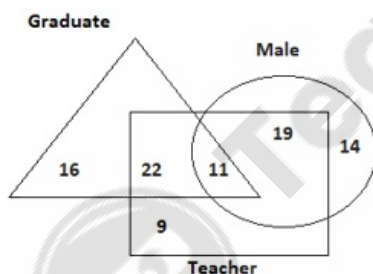
☒ 4. 25

Question ID : 26433057283

Status : Answered

Chosen Option : 3

Q.15 Study the given diagram carefully and answer the question. The numbers in different sections indicate the number of persons.



How many such teachers are there who are NEITHER male NOR graduate?

Ans ☒ 1. 11

☒ 2. 9

☒ 3. 19

☒ 4. 22

Question ID : 26433070409

Status : Answered

Chosen Option : 2

Q.16 Read the given statements and conclusions carefully. Assuming that the information given in the statements is true, even if it appears to be at variance with commonly known facts, decide which of the given conclusions logically follow(s) from the statements.

Statements:

- I. All ladders are tables.
- II. Some tables are chairs.
- III. All chairs are furniture.

Conclusions:

- I. Some furniture are ladders.
- II. All tables are furniture.

- Ans ☒ 1. Neither conclusion I nor II follows
- ☐ 2. Only conclusion I follows
- ☐ 3. Only conclusion II follows
- ☐ 4. Both conclusions I and II follow

Question ID : 26433079083  
Status : Answered  
Chosen Option : 2

Q.17 'P @ Q' means 'P is the husband of Q'  
'P & Q' means 'P is the mother of Q'  
'P # Q' means 'P is the wife of Q'  
'P x Q' means 'P is the brother of Q'

If 'A @ B & C x D # E', then how is E related to A?

- Ans ☐ 1. Son
- ☐ 2. Wife's brother
- ☒ 3. Daughter's husband
- ☐ 4. Wife's father

Question ID : 26433056804  
Status : Answered  
Chosen Option : 3

Q.18 Select the option that is related to the fifth letter cluster in the same way as the second letter cluster is related to the first letter cluster and the fourth letter cluster is related to the third letter cluster.

GBC : UPQ :: DSX : RGL :: PEN : ?

- Ans ☐ 1. BRY
- ☒ 2. DSB
- ☐ 3. DGF
- ☐ 4. LSU

Question ID : 26433074686  
Status : Answered  
Chosen Option : 2

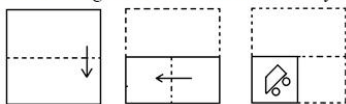
Q.19 Which letter-cluster will replace the question mark (?) to complete the given series?  
WFCI, PAZH, IVWG, ?

- Ans ☒ 1. BQTF
- ☐ 2. CQTF
- ☐ 3. BQTE
- ☐ 4. CQTE

Question ID : 26433057972  
Status : Answered  
Chosen Option : 1

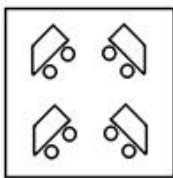


**Q.20** The sequence of folding a piece of paper and the manner in which the folded paper has been cut is shown below.  
Choose a figure which would most closely resemble the unfolded form of the paper.

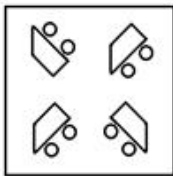


**Ans**

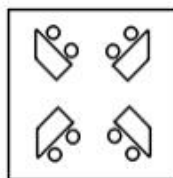
✗ 1.



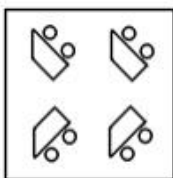
✗ 2.



✓ 3.



✗ 4.



Question ID : 26433057409

Status : Answered

Chosen Option : 3

**Q.21** Select the numbers from among the given options that can replace the question marks (?) in the following series.  
27, 41, 55, 73, ?, ?, 135

**Ans** ✓ 1. 91, 113

✗ 2. 89, 112

✗ 3. 91, 115


✗ 4. 87, 114

Question ID : 26433057043

Status : Answered


Chosen Option : 1

Q.22 Select the figure that will come next in the following figure series.




Ans


✓ 1.




✗ 2.



✗ 3.



✗ 4.



Question ID : 26433076497  
Status : Answered  
Chosen Option : 1

Q.23 Select the combination of letters that when sequentially placed in the blanks of the given series, will complete the series.  
DEFD \_ F \_ DEFD \_ DE \_ DEFD

Ans ✗ 1. DEDE

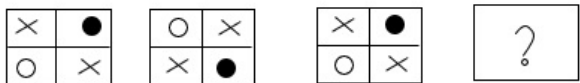
✗ 2. EEFF

✗ 3. EFDF

✓ 4. EDEF

Question ID : 26433057712  
Status : Not Answered  
Chosen Option : --

Q.24 Select the figure that will replace the question mark (?) in the following figure series.

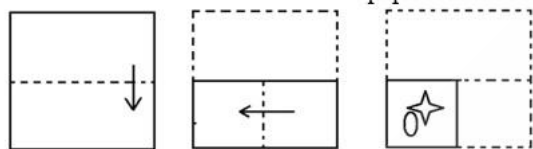


Ans

- ✓ 1.
- ✗ 2.
- ✗ 3.
- ✗ 4.

Question ID : 26433055719  
Status : Answered  
Chosen Option : 1

Q.25 The sequence of folding a piece of paper and the manner in which the folded paper has been cut is shown below. Choose the figure that would most closely resemble the unfolded form of the paper.



Ans

- ✓ 1.
- ✗ 2.
- ✗ 3.
- ✗ 4.

Question ID : 26433067443  
Status : Answered  
Chosen Option : 1

Q.1 Select the option that can be used as a one-word substitute for the given group of words.

A disorder that involve difficulty in reading, interpret words

- Ans ☒ 1. Dyslexia  
☒ 2. Disability  
☒ 3. Dysgraphia  
☒ 4. Delusion

Question ID : 26433063736  
Status : Not Answered  
Chosen Option : --

Q.2 Select the most appropriate ANTONYM of the given word.

Expel

- Ans ☒ 1. Accept  
☒ 2. Eulogise  
☒ 3. Deport  
☒ 4. Adulate

Question ID : 26433058317  
Status : Answered  
Chosen Option : 3

Q.3 Select the most appropriate homonym to fill in the blank.

He is not a \_\_\_\_\_. Don't misunderstand him.

- Ans ☒ 1. chid  
☒ 2. sheath  
☒ 3. cheat  
☒ 4. chit

Question ID : 26433058378  
Status : Answered  
Chosen Option : 3

Q.4 Sentences of a paragraph are given below in jumbled order. Arrange the sentences in the correct order to form a meaningful and coherent paragraph.

- A. The average person has about one to one and a half gallons of a liquid inside his or her body called blood.  
B. The circulatory system is responsible for the movement of blood throughout the body through blood vessels.  
C. Blood is the most essential and important part of the body's circulatory system.  
D. The heart is the pump that makes it all happen

- Ans ☒ 1. ACBD  
☒ 2. ADCB  
☒ 3. CABD  
☒ 4. ABDC

Question ID : 26433058283  
Status : Answered  
Chosen Option : 1

Q.5 Select the INCORRECTLY spelt word in the following sentence.  
Early rising enables us to get a long day ahead of us, permitting us to wrap up all of our work efficiently.

- Ans
- ☒ 1. wrap up
  - ☒ 2. efficiently
  - ☒ 3. enables
  - ☒ 4. permitting

Question ID : 26433058605  
Status : Answered  
Chosen Option : 2

Q.6 Select the option that can be used as a one-word substitute for the underlined group of words.  
Advertisements on television for soaps promise younger looking skin.

- Ans
- ☒ 1. Rejuvenated
  - ☒ 2. Brighter
  - ☒ 3. Lighter
  - ☒ 4. Smarter

Question ID : 26433060399  
Status : Answered  
Chosen Option : 2

Q.7 The following sentence has been divided into parts. One of them may contain an error.  
Select the part that contains the error from the given options. If you don't find any error, mark 'No error' as your answer.

Sam slowly poured / the juice / inside the glass.

- Ans
- ☒ 1. the juice
  - ☒ 2. Sam slowly poured
  - ☒ 3. inside the glass
  - ☒ 4. No error

Question ID : 26433061469  
Status : Answered  
Chosen Option : 3

Q.8 Select the most appropriate meaning of the underlined idiom in the given sentence.

He backed up his friend's claim.

- Ans
- ☒ 1. added to
  - ☒ 2. supported
  - ☒ 3. withdrew
  - ☒ 4. collected

Question ID : 26433071896  
Status : Answered  
Chosen Option : 2

Q.9 Select the most appropriate synonym of the given word.  
Diligent

- Ans ☒ 1. Industrious  
☐ 2. Lazy  
☐ 3. Intelligent  
☐ 4. Handsome

Question ID : 26433059131  
Status : Answered  
Chosen Option : 3

Q.10 Select the most appropriate option that can substitute the underlined segment in the given sentence.

My mother always loves to spend her leisure time on our piece of enclosed land planted with fruit trees.

- Ans ☐ 1. garden  
☐ 2. farm  
☐ 3. lawn  
☒ 4. orchard

Question ID : 26433072401  
Status : Answered  
Chosen Option : 1

Q.11 The following sentence has been divided into parts. One of them may contain an error. Select the part that contains the error from the given options. If you don't find any error, mark 'No error' as your answer.

His whole life, he wrote music, / played the piano, / and was a singer.

- Ans ☐ 1. played the piano  
☐ 2. His whole life he wrote music  
☐ 3. No error  
☒ 4. and was a singer

Question ID : 26433061495  
Status : Answered  
Chosen Option : 2

Q.12 Sentences of a paragraph are given below in jumbled order. Arrange the sentences in the correct order to form a meaningful and coherent paragraph.

- A. It accounts for the adaptation and evolution of organisms, those innumerable features that so wonderfully equip them for survival and reproduction.  
B. It is by way of this passive choosing, this natural selection, that the physical features of an entire population come to change over time.  
C. Furthermore, it accounts for the divergence of species from common ancestors and thus for the endless diversity of life.  
D. The theory of natural selection is the centerpiece of On the Origin of Species and of evolutionary theory.

- Ans ☐ 1. ABDC  
☐ 2. DCAB  
☒ 3. DACB  
☐ 4. BACD

Question ID : 26433060727  
Status : Answered  
Chosen Option : 3

Q.13 Select the most appropriate option to fill in the blank.

A human being requires a \_\_\_\_\_ intake of nutrients and protein for keeping a fit and healthy body.

- Ans
- ☒ 1. certain
  - ☒ 2. balanced
  - ☒ 3. hygienic
  - ☒ 4. similar

Question ID : 26433072404

Status : Answered

Chosen Option : 2

Q.14 Select the most appropriate option to fill in the blank.

The steady progress of military technology has brought weapons of ever-increasing \_\_\_\_\_ power.

- Ans
- ☒ 1. world-ending
  - ☒ 2. killer
  - ☒ 3. destructive
  - ☒ 4. super

Question ID : 26433060773

Status : Answered

Chosen Option : 3

Q.15 Select the most appropriate option that can substitute the underlined segment in the given sentence.

The teacher told him strictly that he hadn't ought to do that in the class.

- Ans
- ☒ 1. ought not has done
  - ☒ 2. ought not to have done
  - ☒ 3. ought not done
  - ☒ 4. hadn't ought to have done

Question ID : 26433065179

Status : Answered

Chosen Option : 2

Q.16 Select the most appropriate synonym of the given word.

Vagrant

- Ans
- ☒ 1. Trader
  - ☒ 2. Loser
  - ☒ 3. Drifter
  - ☒ 4. Fighter

Question ID : 26433055856

Status : Not Answered

Chosen Option : --

Q.17 Select the INCORRECTLY spelt word.

- Ans ☒ 1. Eternel  
☒ 2. Supreme  
☒ 3. Ultimate  
☒ 4. Perfect

Question ID : 26433055466

Status : Answered

Chosen Option : 1

Q.18 Select the most appropriate meaning of the given idiom.  
Better late than never

- Ans ☒ 1. Timely and efficient  
☒ 2. Better to arrive late than not to come at all  
☒ 3. Always be on time  
☒ 4. Better to equip yourselves to be quick

Question ID : 26433066117

Status : Answered

Chosen Option : 2

Q.19 Select the most appropriate synonym of the given word.  
Accrue

- Ans ☒ 1. Fetter  
☒ 2. Gather  
☒ 3. Reject  
☒ 4. Spank

Question ID : 26433066103

Status : Not Answered

Chosen Option : --

Q.20 Select the most appropriate synonym of the underlined word in the given sentence.  
The care, affection, and guidance which I have got from my teachers inspired me to become a teacher.

- Ans ☒ 1. infused  
☒ 2. quickened  
☒ 3. compelled  
☒ 4. motivated

Question ID : 26433058584

Status : Answered

Chosen Option : 4



**Comprehension:**

In the following passage, some words have been deleted. Read the passage carefully and select the most appropriate option to fill in each blank.

The room was decorated with a number of (1) \_\_\_\_\_ objects, difficult to be seen around, small items of antique statuary and clay pots. (2) \_\_\_\_\_ the wall hung a stick, (3) \_\_\_\_\_ about with ivy leaves. It was (4) \_\_\_\_\_ with a small chaise longue. The wooden boards (5) \_\_\_\_\_ beneath the feet of the boy present.

**SubQuestion No : 21**

**Q.21** Select the most appropriate option to fill in blank number 1.

- Ans   ☒ 1. creaky  
      ☒ 2. absolute  
      ☒ 3. unusual  
      ☒ 4. frequent

Question ID : 26433058848  
Status : Answered  
Chosen Option : 3

**Comprehension:**

In the following passage, some words have been deleted. Read the passage carefully and select the most appropriate option to fill in each blank.

The room was decorated with a number of (1) \_\_\_\_\_ objects, difficult to be seen around, small items of antique statuary and clay pots. (2) \_\_\_\_\_ the wall hung a stick, (3) \_\_\_\_\_ about with ivy leaves. It was (4) \_\_\_\_\_ with a small chaise longue. The wooden boards (5) \_\_\_\_\_ beneath the feet of the boy present.

**SubQuestion No : 22**

**Q.22** Select the most appropriate option to fill in blank number 2.

- Ans   ☒ 1. Upon  
      ☒ 2. Beside  
      ☒ 3. On  
      ☒ 4. Above

Question ID : 26433058849  
Status : Answered  
Chosen Option : 3

**Comprehension:**

In the following passage, some words have been deleted. Read the passage carefully and select the most appropriate option to fill in each blank.

The room was decorated with a number of (1) \_\_\_\_\_ objects, difficult to be seen around, small items of antique statuary and clay pots. (2) \_\_\_\_\_ the wall hung a stick, (3) \_\_\_\_\_ about with ivy leaves. It was (4) \_\_\_\_\_ with a small chaise longue. The wooden boards (5) \_\_\_\_\_ beneath the feet of the boy present.

**SubQuestion No : 23**

**Q.23** Select the most appropriate option to fill in blank number 3.

- Ans   ☒ 1. wound  
      ☒ 2. held  
      ☒ 3. tied  
      ☒ 4. scattered

Question ID : 26433058850  
Status : Answered  
Chosen Option : 3

**Comprehension:**

In the following passage, some words have been deleted. Read the passage carefully and select the most appropriate option to fill in each blank.

The room was decorated with a number of (1) \_\_\_\_\_ objects, difficult to be seen around, small items of antique statuary and clay pots. (2) \_\_\_\_\_ the wall hung a stick, (3) \_\_\_\_\_ about with ivy leaves. It was (4) \_\_\_\_\_ with a small chaise longue. The wooden boards (5) \_\_\_\_\_ beneath the feet of the boy present.

**SubQuestion No : 24**

**Q.24** Select the most appropriate option to fill in blank number 4.

- Ans   ☒ 1. famished  
      ☒ 2. fissured  
      ☒ 3. furnished  
      ☒ 4. featured

Question ID : 26433058851  
Status : Answered  
Chosen Option : 3

**Comprehension:**

In the following passage, some words have been deleted. Read the passage carefully and select the most appropriate option to fill in each blank.

The room was decorated with a number of (1) \_\_\_\_\_ objects, difficult to be seen around, small items of antique statuary and clay pots. (2) \_\_\_\_\_ the wall hung a stick, (3) \_\_\_\_\_ about with ivy leaves. It was (4) \_\_\_\_\_ with a small chaise longue. The wooden boards (5) \_\_\_\_\_ beneath the feet of the boy present.

**SubQuestion No : 25**

**Q.25** Select the most appropriate option to fill in blank number 5.

- Ans   ☒ 1. crumbled  
      ☒ 2. swiped  
      ☒ 3. snapped  
      ☒ 4. creaked

Question ID : 26433058852  
Status : Answered  
Chosen Option : 2

**Section : Part-E- Computer Fundamentals**

**Q.1** In MS-Excel 2010 \_\_\_\_\_ function provides only the current system date.

- Ans   ☒ 1. TODAY  
      ☒ 2. YEAR  
      ☒ 3. CURRENT  
      ☒ 4. NOW

Question ID : 26433095461  
Status : Answered  
Chosen Option : 1

**Q.2** Which of the following is the symbol that must be used in email address?

- Ans   ☒ 1. %  
      ☒ 2. @  
      ☒ 3. #  
      ☒ 4. \$

Question ID : 26433095325  
Status : Answered  
Chosen Option : 2

Q.3 Hide option is present in \_\_\_\_\_ tab in MS-Excel 2010 ribbon bar.

- Ans ☒ 1. View  
☒ 2. Data  
☒ 3. File  
☒ 4. Insert

Question ID : 26433095449  
Status : Answered  
Chosen Option : 1

Q.4 \_\_\_\_\_ function in MS-Excel 2010 returns the total number of characters in a string.

- Ans ☒ 1. LEN  
☒ 2. SUM  
☒ 3. COUNTIF  
☒ 4. COUNTA

Question ID : 26433095460  
Status : Answered  
Chosen Option : 3

Q.5 A markup language and file format used for storing, transmitting, and reconstructing arbitrary data is known as \_\_\_\_\_.

- Ans ☒ 1. XML  
☒ 2. EML  
☒ 3. HTML  
☒ 4. SGML

Question ID : 26433095506  
Status : Answered  
Chosen Option : 3

Q.6 Which of the following is not a document processing software?

- Ans ☒ 1. Microsoft Word  
☒ 2. Notepad  
☒ 3. WordPad  
☒ 4. Open Office Impress

Question ID : 26433095494  
Status : Answered  
Chosen Option : 4

Q.7 In MS-Excel 2010 \_\_\_\_\_ are named from A onwards and \_\_\_\_\_ are named from 1 onwards.

- Ans ☒ 1. chart, graph  
☒ 2. table, pivot table  
☒ 3. columns, rows  
☒ 4. rows, columns

Question ID : 26433095423  
Status : Answered  
Chosen Option : 4

Q.8 In MS-Excel 2010 \_\_\_\_\_ is used for hiding columns within the sheet.

- Ans
- ✓ 1. Ctrl + 0
  - ✗ 2. Ctrl + 9
  - ✗ 3. Alt + 0
  - ✗ 4. Alt + 9

Question ID : 26433095483  
Status : Not Answered  
Chosen Option : --

Q.9 Mozilla is a web browsing software developed in the year \_\_\_\_\_, by the Mozilla Foundation.

- Ans
- ✗ 1. 2003
  - ✗ 2. 2001
  - ✗ 3. 2000
  - ✓ 4. 2002

Question ID : 26433095407  
Status : Not Answered  
Chosen Option : --

Q.10 The \_\_\_\_\_ is a name for the lower edge of the worksheet window, which displays various information about an excel worksheet in MS-Excel 2010.

- Ans
- ✗ 1. Ribbon
  - ✓ 2. Status bar
  - ✗ 3. Task bar
  - ✗ 4. Title bar

Question ID : 26433095389  
Status : Answered  
Chosen Option : 2

