



Teachingninja.in



Latest Govt Job updates



Private Job updates



Free Mock tests available



Visit - teachingninja.in



Delhi Police Head Constable

**Previous Year Paper
(Ministerial) 13 Oct 2022
Shift 1**



Head Constable Ministerial in Delhi Police Examination 2022

| | |
|----------------|-------------------------------------------------------------|
| Roll Number | |
| Candidate Name | |
| Venue Name | |
| Exam Date | 13/10/2022 |
| Exam Time | 9:00 AM - 10:30 AM |
| Subject | Head Constable Ministerial in Delhi Police Examination 2022 |

Section : Part-A-General Awareness

Q.1 Shri Sushil Chandra who was appointed in April 2021, is the _____ Chief Election Commissioner of India.

- Ans
- ✗ 1. 23rd
 - ✗ 2. 44th
 - ✓ 3. 24th
 - ✗ 4. 43rd

Question ID : 26433061822
Status : Answered
Chosen Option : 3

Q.2 Which state recorded the highest female literacy rate in India in the 2011 census?

- Ans
- ✗ 1. Chandigarh
 - ✓ 2. Kerala
 - ✗ 3. Mizoram
 - ✗ 4. Maharashtra

Question ID : 26433055338
Status : Answered
Chosen Option : 2

Q.3 Who among the following British police officers was killed mistakenly instead of James Scott by Bhagat Singh and his followers on 17 December 1928?

- Ans
- ✗ 1. Edward Bradford
 - ✗ 2. James Monro
 - ✗ 3. Charles George Baker
 - ✓ 4. John Saunders

Question ID : 26433065543
Status : Answered
Chosen Option : 4

Q.4 Protecting the natural environment is which kind of the following Constitutional Provisions?

- Ans
- ☐ 1. Directive Principles of State Policy
 - ☐ 2. Natural Duty
 - ☐ 3. Fundamental Right
 - ☒ 4. Fundamental Duty

Question ID : 26433071649

Status : Answered

Chosen Option : 3

Q.5 In March 2022, which state government launched 'Naan Mudhalvan' project to equip 10 lakh youth across the state annually with education, knowledge, skills, and energy that will help them realise their talents for the benefit of the country?

- Ans
- ☒ 1. Tamil Nadu
 - ☐ 2. Haryana
 - ☐ 3. Himachal Pradesh
 - ☐ 4. Odisha

Question ID : 26433054832

Status : Not Answered

Chosen Option : --

Q.6 In India, The Annual Financial Statement is generally implemented for the period

- Ans
- ☐ 1. 1st April to 30th September
 - ☒ 2. 1st April to 31st March
 - ☐ 3. 1st January to 31st December
 - ☐ 4. 1st July to 30th June

Question ID : 26433059087

Status : Answered

Chosen Option : 2

Q.7 Who is considered as the main architect of the Second Five-Year Plan in India?

- Ans
- ☒ 1. PC Mahalanobis
 - ☐ 2. VKRV Rao
 - ☐ 3. DT Lakdawala
 - ☐ 4. DR Gadgil

Question ID : 26433059264

Status : Answered

Chosen Option : 1

Q.8 The Insurance (Amendment) Act, 2021 amends which of the following Acts?

- Ans
- ☒ 1. The Emergency Risks (Goods) Insurance Act, 1971
 - ☒ 2. The Marine Insurance Act, 1963
 - ☒ 3. The Insurance Act, 1938
 - ☒ 4. The General Insurance Business (Nationalisation) Act, 1972

Question ID : 26433055564
Status : Answered
Chosen Option : 4

Q.9 In which year was the Tata Iron and Steel Company founded?

- Ans
- ☒ 1. 1909
 - ☒ 2. 1905
 - ☒ 3. 1907
 - ☒ 4. 1906

Question ID : 26433055531
Status : Answered
Chosen Option : 3

Q.10 Who among the following the first Indian male shuttler to win the silver medal in the BWF World Championships 2021?

- Ans
- ☒ 1. Chirag Shetty
 - ☒ 2. Prannoy Kumar
 - ☒ 3. Kidambi Srikanth
 - ☒ 4. Parupalli Kashyap

Question ID : 26433061807
Status : Answered
Chosen Option : 1

Q.11 In India, poverty is a major problem. Which of the following statements is NOT correct about poverty?

- Ans
- ☒ 1. People enjoy quality of life and have access to drinking water.
 - ☒ 2. People lack housing.
 - ☒ 3. People have unemployment.
 - ☒ 4. People have irregular work.

Question ID : 26433079543
Status : Answered
Chosen Option : 1

Q.12 Which of the following battles was fought between Medini Rai and Babur?

- Ans ☒ 1. Battle of Chanderi
- ☐ 2. Second battle of Panipat
- ☐ 3. First battle of Panipat
- ☐ 4. Battle of Kannauj

Question ID : 26433055617
Status : Answered
Chosen Option : 1

Q.13 A memorandum of understanding (MoU) was signed between the Pharmacopoeia Commission for Indian Medicine and Homoeopathy (Ministry of Ayush) and the Indian Pharmacopoeia Commission (Ministry of Health) for inter-ministerial cooperation for the promotion and facilitation of which of the following programmes in Aug 2022?

- Ans ☐ 1. Bacha aur Shiksha
- ☐ 2. Mahila aur Swasthya
- ☒ 3. One Herb, One Standard
- ☐ 4. Poshan Abhiyan

Question ID : 26433095263
Status : Answered
Chosen Option : 2

Q.14 Which of the following is the most commonly used measure of money supply and is also known as aggregate monetary resources?

- Ans ☐ 1. M4
- ☐ 2. M1
- ☒ 3. M3
- ☐ 4. M2

Question ID : 26433064498
Status : Not Answered
Chosen Option : --

Q.15 The Tapu dance is primarily performed in the Indian state of _____.

- Ans ☐ 1. Uttar Pradesh
- ☐ 2. Gujarat
- ☒ 3. Arunachal Pradesh
- ☐ 4. Andhra Pradesh

Question ID : 26433064301
Status : Not Answered
Chosen Option : --

Q.16 Which of the following schools of temple architecture was developed by the Chandela dynasty?

- Ans
- ☒ 1. Dravidian
 - ☒ 2. Khajuraho
 - ☒ 3. Solanki
 - ☒ 4. Odisha

Question ID : 26433064367
Status : Not Answered
Chosen Option : --

Q.17 A team of researchers of which institute has developed a novel nanoparticle-based bio-degradable-carbonoid-metabolite (BioDCM) that can protect agricultural crops from fungal and bacterial infections?

- Ans
- ☒ 1. Indian Institute of Technology, Chennai
 - ☒ 2. Indian Institute of Technology, Mumbai
 - ☒ 3. Indian Institute of Technology, Kharagpur
 - ☒ 4. Indian Institute of Technology, Kanpur

Question ID : 26433095284
Status : Not Answered
Chosen Option : --

Q.18 The Shigmo festival is primarily celebrated in which of the following states of India?

- Ans
- ☒ 1. Goa
 - ☒ 2. Karanataka
 - ☒ 3. Bihar
 - ☒ 4. Manipur

Question ID : 26433064335
Status : Not Answered
Chosen Option : --

Q.19 Which of the following places will have the highest annual range of temperature?

- Ans
- ☒ 1. Kolkata
 - ☒ 2. Srinagar
 - ☒ 3. Mumbai
 - ☒ 4. Jaisalmer

Question ID : 26433055312
Status : Answered
Chosen Option : 4

Q.20 Which of the following abbreviations is associated with cement industry in India?

- Ans
- ☒ 1. BCCI
 - ☒ 2. MCI
 - ☒ 3. ACC
 - ☒ 4. FCI

Question ID : 26433066588

Status : Answered

Chosen Option : 3

Section : Part-B-Quantitative Aptitude

Q.1 Namita bought a cell phone for ₹2,575 and sold it at a profit of 12%. The selling price (in ₹) is:

- Ans
- ☒ 1. 2657
 - ☒ 2. 2884
 - ☒ 3. 2557
 - ☒ 4. 2874

Question ID : 26433058273

Status : Answered

Chosen Option : 2

Q.2 If $4x^2 + \frac{1}{x^2} = 12$ for a positive number x , then the value of $8x^3 + \frac{1}{x^3}$ is:

- Ans
- ☒ 1. 64
 - ☒ 2. 16
 - ☒ 3. 40
 - ☒ 4. 4

Question ID : 26433062681

Status : Answered

Chosen Option : 4

Q.3 Metal spheres, each of radius 1 cm, are packed in a rectangular box of dimensions 12 cm × 4 cm × 4 cm. When 24 spheres are packed, the box is filled with preservative liquid. What is the volume (in cm^3 , rounded off to 1 decimal place) of the liquid?

(Take $\pi = \frac{22}{7}$)

- Ans
- ☒ 1. 192
 - ☒ 2. 91.4
 - ☒ 3. 101
 - ☒ 4. 87.5

Question ID : 26433063261

Status : Not Answered

Chosen Option : --

Q.4 The value of $\frac{(p-q)^3 + (q-r)^3 + (r-p)^3}{(p^2 - q^2)^3 + (q^2 - r^2)^3 + (r^2 - p^2)^3}$ is:

Where $p \neq q \neq r$

Ans

✓ 1. $\frac{1}{(p+q)(q+r)(r+p)}$

✗ 2. 1

✗ 3. $\frac{1}{(p+q+r)}$

✗ 4. 0

Question ID : 26433061115

Status : Not Answered

Chosen Option : --

Q.5 If the ratio of surface area of two spheres is 9 : 4, then the ratio of their diameters is

Ans ✓ 1. 3 : 2

✗ 2. 2 : 3

✗ 3. 4 : 9

✗ 4. 9 : 4

Question ID : 26433056342

Status : Not Answered

Chosen Option : --

Q.6 Which of the following is a prime number?

Ans ✗ 1. 697

✗ 2. 657

✗ 3. 679

✓ 4. 701

Question ID : 26433079839

Status : Answered

Chosen Option : 4

Q.7 P and Q can complete a task in 30 days. Q and R can do the identical task in 24 days, while R and P can complete it in 20 days. They began working together, but after 10 days, Q and R left. How long will it take P to complete the remaining task?

Ans ✗ 1. 21 days

✗ 2. 14 days

✗ 3. 17 days

✓ 4. 18 days

Question ID : 26433061444

Status : Not Answered

Chosen Option : --

Q.8 Convert $0.\overline{454}$ into fraction.

- Ans
- ☒ 1. $\frac{7}{11}$
 - ☒ 2. $\frac{11}{5}$
 - ☒ 3. $\frac{5}{11}$
 - ☒ 4. $\frac{11}{7}$

Question ID : 26433063445
Status : Not Answered
Chosen Option : --

Q.9 In a race of 800 m, Ram can beat Shyam by 50 m, and in a race of 600 m, Shyam can beat Ghanshyam by 40 m. By how many metres will Ram beat Ghanshyam in a race of 400m?

- Ans
- ☒ 1. 80 m
 - ☒ 2. 50 m
 - ☒ 3. 40 m
 - ☒ 4. 100 m

Question ID : 26433061738
Status : Not Answered
Chosen Option : --

Q.10 A sum of Rs.2,425 when invested at a certain rate of simple interest per annum for 12 years, earns an interest of Rs.5,238 on maturity. What is the rate of simple interest per annum?

- Ans
- ☒ 1. 16%
 - ☒ 2. 18%
 - ☒ 3. 12%
 - ☒ 4. 14%

Question ID : 26433066314
Status : Not Answered
Chosen Option : --

Q.11 A class of 25 students took a science test. 10 students got an average score of 80. The other students got an average score of 60. What is the average score of the whole class?

- Ans
- ☒ 1. 68
 - ☒ 2. 5.6
 - ☒ 3. 70
 - ☒ 4. 140

Question ID : 26433061190
Status : Answered
Chosen Option : 1

Q.12 A dealer marked the price on his articles 32% more than its cost price and allows a discount of 12%. Find his profit percent.

- Ans
- ☒ 1. 20%
 - ☒ 2. 16.16%
 - ☒ 3. 18.25%
 - ☒ 4. 44%

Question ID : 26433074926
Status : Not Answered
Chosen Option : --

Q.13 The mean proportional of $(a - b)^3(a + b)^3$, $(a - b)(a + b)$ is:

- Ans
- ☒ 1. $(a^2 - b^2)^2$
 - ☒ 2. $a^2 - b^2$
 - ☒ 3. $(a^2 + b^2)^2$
 - ☒ 4. $a^2 + b^2$

Question ID : 26433061147
Status : Answered
Chosen Option : 1

Q.14 A and B together can do a piece of work in 12 days. If A can alone do the work in 36 days, then the number of days required by B to finish the work is:

- Ans
- ☒ 1. 18
 - ☒ 2. 16
 - ☒ 3. 22
 - ☒ 4. 20

Question ID : 26433063492
Status : Answered
Chosen Option : 1

Q.15 Solve the following to find its value in terms of trigonometric ratios.

$$\frac{\tan A + \sec A - 1}{\tan A - \sec A + 1}$$

Ans

✗ 1. $\frac{1 - \sin A}{\cos A}$

✓ 2. $\frac{1 + \sin A}{\cos A}$

✗ 3. $\frac{1 - \cos A}{\sin A}$

✗ 4. $\frac{1 + \cos A}{\sin A}$

Question ID : 26433061933

Status : Not Answered

Chosen Option : --

Q.16 The LCM of two numbers is 150 and their HCF is 3. If one of them is 25, the other is:

Ans ✗ 1. 16

✓ 2. 18

✗ 3. 17

✗ 4. 15

Question ID : 26433063361

Status : Not Answered

Chosen Option : --

Q.17 What is the compound interest on Rs.5,000 for 2 years at 10%, per annum, compounded half-yearly?

Ans ✗ 1. Rs.1,025.00

✓ 2. Rs.1,077.50

✗ 3. Rs.1,050.00

✗ 4. Rs.2,320.50

Question ID : 26433058147

Status : Not Answered

Chosen Option : --

Q.18 If the numerator of a fraction is increased by 25% and its denominator is decreased by 10%, the value of the fraction is $\frac{15}{16}$. What is the original fraction?

- Ans
- ☐ 1. $\frac{43}{47}$
 - ☒ 2. $\frac{27}{40}$
 - ☐ 3. $\frac{11}{13}$
 - ☐ 4. $\frac{3}{4}$

Question ID : 26433061244
Status : Not Answered
Chosen Option : --

Q.19 The following table shows the number of students in different streams in 5 departments. Study the table carefully and answer the question based on the table.

| Stream | Department | | | | |
|------------------|------------|-----|-----|-----|-----|
| | A | B | C | D | E |
| Physics | 400 | 500 | 350 | 300 | 600 |
| Chemistry | 750 | 600 | 700 | 500 | 450 |
| Mathematics | 300 | 400 | 450 | 500 | 650 |
| Computer Science | 250 | 300 | 380 | 550 | 750 |

Find the ratio of students in departments A and B in Physics, Chemistry and Computer Science streams.

- Ans
- ☐ 1. 1 : 2
 - ☒ 2. 1 : 1
 - ☐ 3. 2 : 1
 - ☐ 4. 2 : 13

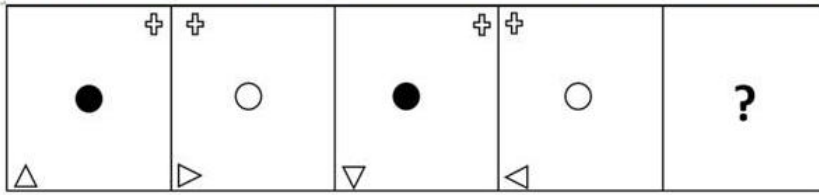
Question ID : 26433064037
Status : Not Answered
Chosen Option : --

Q.20 Two parallel chords of a circle whose diameter is 20 cm are 16 cm and 12 cm, respectively. If both chords are on the same side of the diameter, then the distance between these chords is:

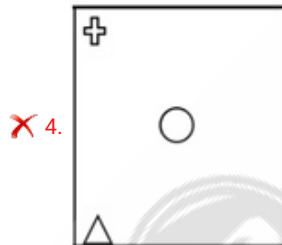
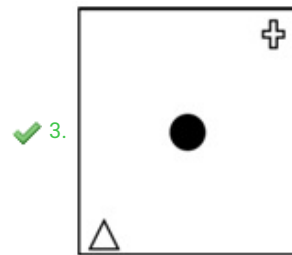
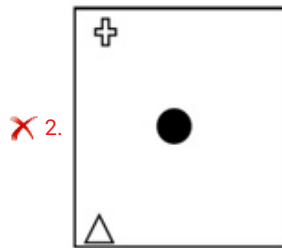
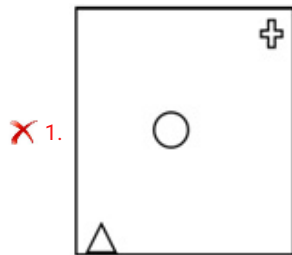
- Ans
- ☐ 1. 1.5 cm
 - ☐ 2. 3 cm
 - ☐ 3. 1 cm
 - ☒ 4. 2 cm

Question ID : 26433058983
Status : Not Answered
Chosen Option : --

Q.1 Select the figure that will replace the question mark (?) in the following figure series.



Ans



Question ID : 26433056091

Status : Answered

Chosen Option : 3

Q.2 Which two numbers, from amongst the given options, should be interchanged to make the given equation correct?

$$39 \div 3 + 13 \times 5 - 9 = 9$$

Ans ✓ 1. 3 and 13

✗ 2. 3 and 9

✗ 3. 5 and 9

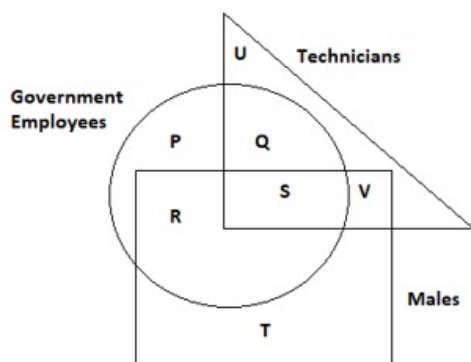
✗ 4. 13 and 9

Question ID : 26433055972

Status : Answered

Chosen Option : 1

Q.3 Study the given diagram carefully and answer the question. The numbers in different sections indicate the number of persons.



Which of the following represents males who are technicians as well as government employees?

- Ans
- ☒ 1. R
 - ☒ 2. S
 - ☒ 3. V
 - ☒ 4. R + S

Question ID : 26433070412

Status : Answered

Chosen Option : 2

Q.4 Seven people T, U, V, W, X, Y and Z, are sitting in a straight row, facing the north. Only three people sit to the left of Z. Z sits third to the left of Y. W sits fourth to the left of V. X is not an immediate neighbour of Y. T sits second to the right of U. Who sits to the immediate right of Z?

- Ans
- ☒ 1. T
 - ☒ 2. W
 - ☒ 3. V
 - ☒ 4. X

Question ID : 26433076521

Status : Not Answered

Chosen Option : --

Q.5 Pointing to the photograph of a man, Rajni said, "He is the brother of the daughter of the wife of my husband." How is the man related to Rajni?

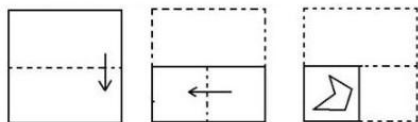
- Ans
- ☒ 1. Son
 - ☒ 2. Father's father
 - ☒ 3. Father
 - ☒ 4. Brother

Question ID : 26433068013

Status : Not Answered

Chosen Option : --

Q.6 The sequence of folding a piece of paper and the manner in which the folded paper has been cut is shown below.
Select the figure which would most closely resemble the unfolded form of the paper.



Ans

- ✗ 1.
- ✗ 2.
- ✗ 3.
- ✓ 4.

Question ID : 26433056689
Status : Answered
Chosen Option : 2

Q.7 Select the set in which the numbers are related in the same way as are the numbers of the following sets.
(NOTE: Operations should be performed on the whole numbers, without breaking down the numbers into its constituent digits. E.g. 13 – Operations on 13 such as adding/deleting/multiplying etc. to 13 can be performed. Breaking down 13 into 1 and 3 and then performing mathematical operations on 1 and 3 is not allowed.)
(31, 46, 54)
(23, 48, 47)

- Ans
- ✗ 1. (27, 40, 57)
 - ✗ 2. (26, 42, 38)
 - ✓ 3. (33, 38, 52)
 - ✗ 4. (37, 44, 55)

Question ID : 26433057604
Status : Not Answered
Chosen Option : --

Q.8 Three of the following letter-clusters are alike in some manner and hence form a group. Which letter-cluster does not belong to that group?

- Ans ☒ 1. WDSF
☐ 2. XCTF
☐ 3. ZAVD
☐ 4. VERH

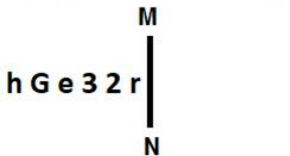
Question ID : 26433056176
Status : Answered
Chosen Option : 1

Q.9 In a code language, 'HELLO' is coded as 42 and 'CRISP' is coded as 55. How will 'NIGHT' be coded in the same language?

- Ans ☒ 1. 48
☐ 2. 43
☐ 3. 50
☐ 4. 49

Question ID : 26433057817
Status : Answered
Chosen Option : 1

Q.10 Select the correct mirror image of the given figure when the mirror is placed at MN as shown below.



- Ans ☐ 1. 1 5 8 6 9 4
☐ 2. 1 7 8 e 9 h
☒ 3. 1 5 8 e 9 h
☐ 4. 1 7 8 e 9 h

Question ID : 26433056987
Status : Answered
Chosen Option : 3

Q.11 In a code language, 'BLOOD' is coded as C38C and 'DEBUT' is coded as S42E. How will 'GRAIN' be coded in the same language?

- Ans ☐ 1. M41H
☒ 2. M39H
☐ 3. L41F
☐ 4. F39L

Question ID : 26433057829
Status : Answered
Chosen Option : 2

Q.12 Select the numbers from among the given options that can replace the question marks (?) in the following series.
123, 76, 110, 63, ?, ?, 84

- Ans
- ☒ 1. 107, 60
 - ☒ 2. 92, 45
 - ☒ 3. 94, 55
 - ☒ 4. 97, 50

Question ID : 26433057046
Status : Not Answered
Chosen Option : --

Q.13 Six friends U, V, W, X, Y and Z are sitting around a circular table facing the centre. Y is sitting second to the left of Z. Z is sitting second to the left of W. X is the only one sitting between Z and W. V is sitting second to the right of X. Who is sitting between X and V?

- Ans
- ☒ 1. Y
 - ☒ 2. W
 - ☒ 3. U
 - ☒ 4. Z

Question ID : 26433055517
Status : Answered
Chosen Option : 2

Q.14 Which of the following numbers will replace the question mark (?) in the given series?
5, 19, 49, 101, ?

- Ans
- ☒ 1. 176
 - ☒ 2. 184
 - ☒ 3. 181
 - ☒ 4. 188

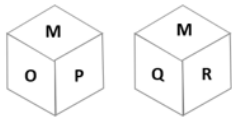
Question ID : 26433057552
Status : Not Answered
Chosen Option : --

Q.15 'Abundant' is related to 'Scarce' in the same way as 'Artificial' is related to '_____'.
(The words must be considered as meaningful English words and must NOT be related to each other based on the number of letters/number of consonants/vowels in the word)

- Ans
- ☒ 1. Natural
 - ☒ 2. Insincere
 - ☒ 3. Hollow
 - ☒ 4. Pretend

Question ID : 26433078887
Status : Answered
Chosen Option : 1

Q.16 Six letters M, N, O, P, Q and R are written on different faces of a dice. Two positions of this dice are shown in the figure. Find the letter on the face opposite to Q.



- Ans
- ☒ 1. P
 - ☒ 2. R
 - ☒ 3. O
 - ☒ 4. N

Question ID : 26433057795
Status : Answered
Chosen Option : 3

Q.17 Select the correct combination of mathematical signs to sequentially replace the * signs and to balance the given equation.
 $981 * 672 * 469 * 3 * 441 * 7 = 309$

- Ans
- ☒ 1. -, ÷, x, -, +
 - ☒ 2. -, +, ÷, x, -
 - ☒ 3. ÷, x, -, +, x
 - ☒ 4. +, -, x, +, ÷

Question ID : 26433056530
Status : Answered
Chosen Option : 2

Q.18 Which letter cluster will replace the question mark (?) to complete the given series?
YTUQ, XVRU, ?, VZLC, UBIG

- Ans
- ☒ 1. WYOX
 - ☒ 2. WYOY
 - ☒ 3. WXOY
 - ☒ 4. WXPY

Question ID : 26433065580
Status : Answered
Chosen Option : 3

Q.19 Read the given statements and conclusions carefully. Assuming that the information given in the statements is true, even if it appears to be at variance with commonly known facts, decide which of the given conclusions logically follow(s) from the statements.

Statements:

All Iron is Zinc

Some Copper is gold

No Gold is Zinc.

Conclusions:

(I) Some Iron can be Gold.

(II) No Iron is Gold.

(III) Some Copper is Zinc.

- Ans
- ☐ 1. Either Conclusion (I) or (II) follows
 - ☐ 2. Only Conclusion (I) follows
 - ☐ 3. Only Conclusions (I) and (III) follow
 - ☒ 4. Only Conclusion (II) follows

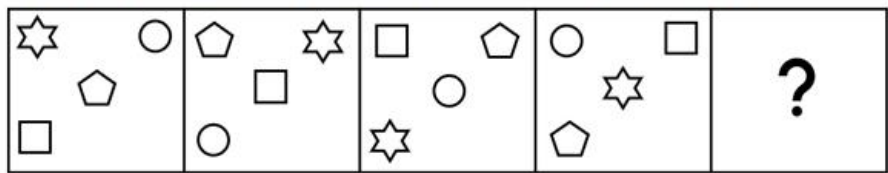
Question ID : 26433079084

Status : Answered

Chosen Option : 4



Q.20 Select the figure that will come next in the following figure series.



Ans

- ✗ 1.
- ✓ 2.
- ✗ 3.
- ✗ 4.

Question ID : 26433076499
Status : Answered
Chosen Option : 2

Q.21 Which of the following options represents the correct order of the given words as they would appear in the English dictionary?

- 1. Hooter
- 2. Hoodlum
- 3. Hoover
- 4. Hoodwink
- 5. Hoop

- Ans
- ✗ 1. 5,2,4,1,3
- ✗ 2. 2,5,4,3,1
- ✗ 3. 4,2,5,3,1
- ✓ 4. 2,4,5,1,3

Question ID : 26433068770
Status : Answered
Chosen Option : 4

Q.22 'A + B' means 'A is the father of B'.
'A - B' means 'A is the mother of B'.
'A × B' means 'A is the husband of B'.
'A ÷ B' means 'A is the sister of B'.

If $C \div M - S - K + T \times Q$, then which of the following statements is NOT correct?

- Ans
- ☒ 1. K is the father-in-law of Q.
 - ☒ 2. S is C's sister's daughter.
 - ☒ 3. S is T's father's father.
 - ☒ 4. M is K's mother's mother.

Question ID : 26433056920
Status : Not Answered
Chosen Option : --

Q.23 Select the option that is related to the fifth term in the same way as the second term is related to the first term and the fourth term is related to the third term.
LOST : XVQM :: HELP : TOGI :: WISE : ?

- Ans
- ☒ 1. HVJX
 - ☒ 2. HWJY
 - ☒ 3. IVKX
 - ☒ 4. HUKY

Question ID : 26433058014
Status : Answered
Chosen Option : 3

Q.24 Select the set in which the numbers are related in the same way as are the numbers of the following sets.
(NOTE: Operations should be performed on the whole numbers, without breaking down the numbers into its constituent digits. E.g. 13 – Operations on 13 such as adding/deleting/multiplying etc. to 13 can be performed. Breaking down 13 into 1 and 3 and then performing mathematical operations on 1 and 3 is not allowed.)
(19, 8, 144)
(13, 6, 72)

- Ans
- ☒ 1. (7, 4, 32)
 - ☒ 2. (9, 3, 18)
 - ☒ 3. (12, 8, 96)
 - ☒ 4. (15, 4, 56)

Question ID : 26433057598
Status : Not Answered
Chosen Option : --

Q.25 Select the combination of letters that when sequentially placed in the blanks of the given series will complete the series.
YR_TYRG_YRGR_RG_

- Ans
- ☒ 1. SYTR
 - ☒ 2. STRP
 - ☒ 3. SYPG
 - ☒ 4. GSYQ

Question ID : 26433074657
Status : Answered
Chosen Option : 4

Q.1 Select the INCORRECTLY spelt word.

- Ans ☒ 1. Hoarse
☒ 2. Roast
☒ 3. Personell
☒ 4. Cynic

Question ID : 26433066148
Status : Answered
Chosen Option : 1

Q.2 The following sentence has been split into four segments. Identify the segment that contains a grammatical error.

Despite of / a short deadline, / he finished the assignment / on time.

- Ans ☒ 1. Despite of
☒ 2. he finished the assignment
☒ 3. a short deadline
☒ 4. on time

Question ID : 26433061475
Status : Answered
Chosen Option : 3

Q.3 Select the most appropriate option to fill in the blank.

Ryan had been waiting at the bus stop _____ 5 p.m.

- Ans ☒ 1. since
☒ 2. around
☒ 3. about
☒ 4. for

Question ID : 26433060091
Status : Answered
Chosen Option : 1

Q.4 Select the most appropriate option to fill in the blanks.

She is a _____ person and changes her mind _____ without any reason.

- Ans ☒ 1. conversant; unusually
☒ 2. capricious; frequently
☒ 3. chaste; occasionally
☒ 4. charismatic; intermittently

Question ID : 26433065183
Status : Answered
Chosen Option : 2

Q.5 Select the most appropriate synonym of the underlined word in the given sentence.
He is a pessimistic person.

- Ans
- ☒ 1. a better
 - ☒ 2. an overthinking
 - ☒ 3. a cynical
 - ☒ 4. a bad

Question ID : 26433055510
Status : Answered
Chosen Option : 2

Q.6 Select the most appropriate synonym of the highlighted word in the following sentence.

He chastised the boy for stealing the purse.

- Ans
- ☒ 1. Thrashed
 - ☒ 2. Invigorated
 - ☒ 3. Reprimanded
 - ☒ 4. Scourged

Question ID : 26433065216
Status : Not Answered
Chosen Option : --

Q.7 Select the most appropriate ANTONYM of the underlined word in a sentence.

She had an excruciating pain in her knees.

- Ans
- ☒ 1. Mild
 - ☒ 2. Acute
 - ☒ 3. Relaxing
 - ☒ 4. Disturbing

Question ID : 26433056003
Status : Answered
Chosen Option : 1

Q.8 Select the most appropriate option to fill in the blanks.

As calf is to cow, so is _____ to lion.

- Ans
- ☒ 1. colt
 - ☒ 2. kid
 - ☒ 3. lamb
 - ☒ 4. cub

Question ID : 26433073264
Status : Answered
Chosen Option : 4

Q.9 Select the most appropriate synonym of the underlined word.

This is a dicey situation.

- Ans
- ☒ 1. Exciting
 - ☐ 2. Uncertain
 - ☐ 3. Playful
 - ☐ 4. Enjoyable

Question ID : 26433058308
Status : Not Answered
Chosen Option : --

Q.10 Select the option that can be used as a one-word substitute for the given group of words.

Something which can be copied

- Ans
- ☒ 1. Imitable
 - ☐ 2. Similarity
 - ☐ 3. Plagiarised
 - ☐ 4. Identical

Question ID : 26433070578
Status : Answered
Chosen Option : 3

Q.11 Select the most appropriate meaning of the given idiom.
Hang in there

- Ans
- ☒ 1. Don't give up
 - ☐ 2. Don't be resilient
 - ☐ 3. Give up just in time
 - ☐ 4. Always go for the gold

Question ID : 26433066120
Status : Answered
Chosen Option : 1

Q.12 Select the option that can be used as a one-word substitute for the given group of words.

Mark with spots or smears of colour

- Ans
- ☐ 1. Moults
 - ☒ 2. Mottle
 - ☐ 3. Mould
 - ☐ 4. Motto

Question ID : 26433060493
Status : Not Answered
Chosen Option : --

Q.13 Identify the error in tense and choose the correct sentence from the following options.

We decorate the living-room at the moment.

- Ans
- ☒ 1. We have been decorating the room at the moment.
 - ☐ 2. We are decorating the living- room at the moment.
 - ☒ 3. We decorates the living-room at the moment.
 - ☒ 4. We were decorating the living-room at the moment.

Question ID : 26433059186
Status : Answered
Chosen Option : 1

Q.14 Select the most appropriate meaning of the given idiom.
Spill the beans

- Ans
- ☒ 1. To crumble under pressure
 - ☐ 2. To give away a secret
 - ☒ 3. To lose a golden opportunity
 - ☒ 4. To handle tough times

Question ID : 26433066130
Status : Answered
Chosen Option : 3

Q.15 Select the INCORRECTLY spelt word.

- Ans
- ☒ 1. Trivial
 - ☒ 2. Triumph
 - ☒ 3. Trouble
 - ☐ 4. Traibe

Question ID : 26433071854
Status : Answered
Chosen Option : 2

Q.16 Select the most appropriate homonym to fill in the blank.

The room was _____ with fans.

- Ans
- ☒ 1. cold
 - ☒ 2. coaled
 - ☐ 3. cooled
 - ☒ 4. cowled

Question ID : 26433058379
Status : Not Answered
Chosen Option : --

Q.17 Parts of sentences are given below in jumbled order. Arrange the parts in the correct order to form meaningful sentences.

- a) I drove up the asylum to see Charlie
- b) looking wane and thin
- c) it was a couple of weeks later that
- d) he was lying on a cot on big-screened-in porch

- Ans
- ☒ 1. a, b, c, d
 - ☒ 2. d, c, a, b
 - ☒ 3. d, b, c, a
 - ☒ 4. c, a, d, b

Question ID : 26433063735
Status : Answered
Chosen Option : 1

Q.18 Select the option that can be used as a one-word substitute for the given group of words.

Extreme physical or mental sufferings

- Ans
- ☒ 1. Pain
 - ☒ 2. Agony
 - ☒ 3. Destitute
 - ☒ 4. Trauma

Question ID : 26433070576
Status : Answered
Chosen Option : 4

Q.19 Select the most appropriate option that can substitute the underlined segment in the given sentence.

The major reason for his fiscal success is that his parents are influential people.

- Ans
- ☒ 1. The major reason for his fiscal successes
 - ☒ 2. The major reasons for his budgetary success
 - ☒ 3. The major reason for his financial success
 - ☒ 4. The major reason for his capitalistic success

Question ID : 26433065174
Status : Answered
Chosen Option : 3

Q.20 Select the most appropriate ANTONYM of the word fulfil from the given sentence:
My father continuously helps me in preparing my lessons and fulfils my demands so that I don't miss and abandon anything easily.

- Ans
- ☒ 1. continuous
 - ☒ 2. help
 - ☒ 3. miss
 - ☒ 4. abandon

Question ID : 26433058553
Status : Answered
Chosen Option : 4

Comprehension:

In the following passage, some words have been deleted. Read the passage carefully and select the most appropriate option to fill in each blank.

The National Institute of Educational Planning and Administration (NIEPA) occupies a unique position in the network of educational institutions in India, with its functions covering a broad spectrum of academic having both, domestic and international (1) _____. The genesis of NIEPA's evolutionary journey dates back to February 1962 when the Asian Regional Centre for Educational Planners, Administrators and Supervisors was established by UNESCO under an agreement signed by the UN Agency and the Government of India. The principal functions of the Centre (2) _____ conduct research on the problems related to educational planning, administration and school supervision as well as conduct short-term training programmes. Subsequently, with effect from 1 April 1965, the fledgling Centre was rechristened as the Asian Institute of Educational Planning and Administration. The (3) _____ of the Asian Institute by the Government of India at the end of a 10-year agreement between it and the UNESCO paved the way for its (4) _____ into the National Staff College for Educational Planners and Administrators in 1970. This college was restructured and re-registered as National Institute of Educational Planning and Administration (NIEPA) on 31 May 1979, with an expanded (5) _____.

SubQuestion No : 21

Q.21 Select the most appropriate option to fill in blank number 1.

- Ans ☒ 1. ramifications
- ☐ 2. origins
- ☐ 3. finales
- ☐ 4. sources

Question ID : 26433058860

Status : Answered

Chosen Option : 4

Comprehension:

In the following passage, some words have been deleted. Read the passage carefully and select the most appropriate option to fill in each blank.

The National Institute of Educational Planning and Administration (NIEPA) occupies a unique position in the network of educational institutions in India, with its functions covering a broad spectrum of academic having both, domestic and international (1) _____. The genesis of NIEPA's evolutionary journey dates back to February 1962 when the Asian Regional Centre for Educational Planners, Administrators and Supervisors was established by UNESCO under an agreement signed by the UN Agency and the Government of India. The principal functions of the Centre (2) _____ conduct research on the problems related to educational planning, administration and school supervision as well as conduct short-term training programmes. Subsequently, with effect from 1 April 1965, the fledgling Centre was rechristened as the Asian Institute of Educational Planning and Administration. The (3) _____ of the Asian Institute by the Government of India at the end of a 10-year agreement between it and the UNESCO paved the way for its (4) _____ into the National Staff College for Educational Planners and Administrators in 1970. This college was restructured and re-registered as National Institute of Educational Planning and Administration (NIEPA) on 31 May 1979, with an expanded (5) _____.

SubQuestion No : 22

Q.22 Select the most appropriate option to fill in blank number 2.

- Ans ☐ 1. was to
- ☐ 2. has to
- ☐ 3. have to
- ☒ 4. were to

Question ID : 26433058861

Status : Answered

Chosen Option : 2

Comprehension:

In the following passage, some words have been deleted. Read the passage carefully and select the most appropriate option to fill in each blank.

The National Institute of Educational Planning and Administration (NIEPA) occupies a unique position in the network of educational institutions in India, with its functions covering a broad spectrum of academic having both, domestic and international (1) _____. The genesis of NIEPA's evolutionary journey dates back to February 1962 when the Asian Regional Centre for Educational Planners, Administrators and Supervisors was established by UNESCO under an agreement signed by the UN Agency and the Government of India. The principal functions of the Centre (2) _____ conduct research on the problems related to educational planning, administration and school supervision as well as conduct short-term training programmes. Subsequently, with effect from 1 April 1965, the fledgling Centre was rechristened as the Asian Institute of Educational Planning and Administration. The (3) _____ of the Asian Institute by the Government of India at the end of a 10-year agreement between it and the UNESCO paved the way for its (4) _____ into the National Staff College for Educational Planners and Administrators in 1970. This college was restructured and re-registered as National Institute of Educational Planning and Administration (NIEPA) on 31 May 1979, with an expanded (5) _____.

SubQuestion No : 23

Q.23 Select the most appropriate option to fill in blank number 3.

- Ans ☒ 1. taking off
☒ 2. taking place
☒ 3. taking over
☒ 4. taking part

Question ID : 26433058862

Status : Not Answered

Chosen Option : --

Comprehension:

In the following passage, some words have been deleted. Read the passage carefully and select the most appropriate option to fill in each blank.

The National Institute of Educational Planning and Administration (NIEPA) occupies a unique position in the network of educational institutions in India, with its functions covering a broad spectrum of academic having both, domestic and international (1) _____. The genesis of NIEPA's evolutionary journey dates back to February 1962 when the Asian Regional Centre for Educational Planners, Administrators and Supervisors was established by UNESCO under an agreement signed by the UN Agency and the Government of India. The principal functions of the Centre (2) _____ conduct research on the problems related to educational planning, administration and school supervision as well as conduct short-term training programmes. Subsequently, with effect from 1 April 1965, the fledgling Centre was rechristened as the Asian Institute of Educational Planning and Administration. The (3) _____ of the Asian Institute by the Government of India at the end of a 10-year agreement between it and the UNESCO paved the way for its (4) _____ into the National Staff College for Educational Planners and Administrators in 1970. This college was restructured and re-registered as National Institute of Educational Planning and Administration (NIEPA) on 31 May 1979, with an expanded (5) _____.

SubQuestion No : 24

Q.24 Select the most appropriate option to fill in blank number 4.

- Ans ☒ 1. dissolution
☒ 2. transformation
☒ 3. stagnation
☒ 4. preservation

Question ID : 26433058863

Status : Answered

Chosen Option : 2

Comprehension:

In the following passage, some words have been deleted. Read the passage carefully and select the most appropriate option to fill in each blank.

The National Institute of Educational Planning and Administration (NIEPA) occupies a unique position in the network of educational institutions in India, with its functions covering a broad spectrum of academic having both, domestic and international (1) _____. The genesis of NIEPA's evolutionary journey dates back to February 1962 when the Asian Regional Centre for Educational Planners, Administrators and Supervisors was established by UNESCO under an agreement signed by the UN Agency and the Government of India. The principal functions of the Centre (2) _____ conduct research on the problems related to educational planning, administration and school supervision as well as conduct short-term training programmes. Subsequently, with effect from 1 April 1965, the fledgling Centre was rechristened as the Asian Institute of Educational Planning and Administration. The (3) _____ of the Asian Institute by the Government of India at the end of a 10-year agreement between it and the UNESCO paved the way for its (4) _____ into the National Staff College for Educational Planners and Administrators in 1970. This college was restructured and re-registered as National Institute of Educational Planning and Administration (NIEPA) on 31 May 1979, with an expanded (5) _____.

SubQuestion No : 25

Q.25 Select the most appropriate option to fill in blank number 5.

- Ans ☒ 1. mandate
- ☐ 2. area
- ☐ 3. breach
- ☐ 4. request

Question ID : 26433058864
Status : Answered
Chosen Option : 2

Section : Part-E- Computer Fundamentals

Q.1 Which of the following keyboard shortcut used to start a new line in the same cell in MS-Excel 2010 worksheet?

- Ans ☐ 1. Tab + Enter
- ☐ 2. Shift + Enter
- ☒ 3. Alt + Enter
- ☐ 4. Ctrl + Enter

Question ID : 26433095289
Status : Answered
Chosen Option : 1

Q.2 Choose the wrong option with respect to MS-Excel 2010:

- Ans ☒ 1. In MS-Excel 2010, we cannot insert comment to a cell.
- ☐ 2. In MS-Excel 2010, we can insert a table from insert tab.
- ☐ 3. In MS-Excel 2010, we can save the file by using F12.
- ☐ 4. In MS-Excel 2010, to open a new file Ctrl+N is used.

Question ID : 26433095444
Status : Answered
Chosen Option : 2

Q.3 An IPv4 address is of ____ bits.

- Ans
- ☒ 1. 64
 - ☒ 2. 16
 - ☒ 3. 32
 - ☒ 4. 128

Question ID : 26433095326
Status : Answered
Chosen Option : 2

Q.4 In MS-Excel 2010 ____ looks up values in reference or array.

- Ans
- ☒ 1. SUM
 - ☒ 2. MATCH
 - ☒ 3. VLOOKUP
 - ☒ 4. COUNT

Question ID : 26433095390
Status : Not Answered
Chosen Option : --

Q.5 In MS-Excel 2010, ____ operation is used to open an already existing file.

- Ans
- ☒ 1. OPEN
 - ☒ 2. SAVE AS
 - ☒ 3. NEW
 - ☒ 4. SAVE

Question ID : 26433095411
Status : Answered
Chosen Option : 1

Q.6 The ____ field in an e-mail indicates the purpose of that e-mail.

- Ans
- ☒ 1. Subject
 - ☒ 2. Bcc
 - ☒ 3. To
 - ☒ 4. From

Question ID : 26433095465
Status : Answered
Chosen Option : 1

Q.7 Which of the following key is used to run spell check in MS-Word 2010?

- Ans
- ☒ 1. F1
 - ☒ 2. F3
 - ☒ 3. F7
 - ☒ 4. F5

Question ID : 26433095373
Status : Not Answered
Chosen Option : --

Q.8 _____ can easily be spread to the computers connected to internet. Such attacks may cause your system to crash, or your important data may get deleted.

- Ans
- ☒ 1. CHAT
 - ☒ 2. VIRUS
 - ☒ 3. EMAIL
 - ☒ 4. SEARCH

Question ID : 26433095447
Status : Answered
Chosen Option : 2

Q.9 In MS-Word 2010, which shortcut key is used to delete a character to the right side?

- Ans
- ☒ 1. Delete
 - ☒ 2. Ctrl+Delete
 - ☒ 3. Ctrl+Backspace
 - ☒ 4. Alt+Backspace

Question ID : 26433095541
Status : Answered
Chosen Option : 3

Q.10 When a document of MS-Word 2010 is already open, which keyboard shortcut is used to open a new document?

- Ans
- ☒ 1. Ctrl + N
 - ☒ 2. Ctrl + X
 - ☒ 3. Ctrl + Y
 - ☒ 4. Ctrl + V

Question ID : 26433095322
Status : Answered
Chosen Option : 1

