



Teachingninja.in



Latest Govt Job updates



Private Job updates



Free Mock tests available

Visit - teachingninja.in



Delhi Police Head Constable

**Previous Year Paper
(Ministerial) 17 Oct 2022
Shift 1**



Head Constable Ministerial in Delhi Police Examination 2022

Roll Number	
Candidate Name	
Venue Name	
Exam Date	17/10/2022
Exam Time	9:00 AM - 10:30 AM
Subject	Head Constable Ministerial in Delhi Police Examination 2022

Section : Part-A-General Awareness

Q.1 The Constitution of India establishes a judicial system that is:

Ans ☒ 1. under the control of the Parliament

☐ 2. integral and independent

☒ 3. similar to the British system

☒ 4. under the control of the State

Question ID : 26433069847

Status : Answered

Chosen Option : 2

Q.2 Who among the following became the Minister of Health and Family Welfare (MoHFW) in July 2021?

Ans ☐ 1. Mansukh Mandaviya

☒ 2. Ramchandra Prasad Singh

☒ 3. Narayan Rane

☒ 4. Pashu Pati Kumar Paras

Question ID : 26433061792

Status : Not Answered

Chosen Option : --

Q.3 Which are the most recent landforms in India?

Ans ☒ 1. East coast of India

☒ 2. Peninsular India

☒ 3. Deccan plateau

☐ 4. Himalayas and the Northern Plains

Question ID : 26433071591

Status : Not Answered

Chosen Option : --

Q.4 Where and in which year was the Congress of the Oppressed Nations held?

Ans ☒ 1. Frankfurt, in 1925

☐ 2. Brussels, in 1927

☒ 3. London, in 1926

☒ 4. London, in 1925

Question ID : 26433061792

Status : Not Answered

Chosen Option : --



Q.5 Which of the following committees gave regulatory recommendations for microfinance?

- Ans ☒ 1. Rangarajan Committee
- ☒ 2. Malegam Committee
- ☒ 3. Jalan Committee
- ☒ 4. Das Committee

Question ID : 26433059094
Status : Not Answered
Chosen Option : --

Q.6 Google Street View service of Google Maps is launched in India in partnership with which of the following companies?

- Ans ☒ 1. Tata Consultancy Services
- ☒ 2. Tech Mahindra
- ☒ 3. HCL Technologies
- ☒ 4. Wipro

Question ID : 26433095287
Status : Not Answered
Chosen Option : --

Q.7 Kalashram, a dance school in New Delhi was started by _____.

- Ans ☒ 1. Pandit Durgalal
- ☒ 2. Sitara Devi
- ☒ 3. Pandit Birju Maharaj
- ☒ 4. Shovana Narayan

Question ID : 26433064308
Status : Not Answered
Chosen Option : --

Q.8 The Regional Rural Banks (Amendment) Bill, 2014 amended which of the following Acts?

- Ans ☒ 1. The Regional Rural Banks Act, 1973
- ☒ 2. The Regional Rural Banks Act, 1974
- ☒ 3. The Regional Rural Banks Act, 1976
- ☒ 4. The Regional Rural Banks Act, 1972

Question ID : 26433059242
Status : Not Answered
Chosen Option : --

Q.9 Kerala Governor Arif Mohammad Khan on 7 February 2022, signed a controversial ordinance to amend which of the following Acts?

- Ans ☒ 1. Kerala Lokpal and Lokayukta Act 1999
- ☒ 2. Kerala Lokayukta Act 1999
- ☒ 3. Kerala Lokpal Act 1996
- ☒ 4. Kerala Lokpal and Lokayukta Act 1996

Question ID : 26433055038
Status : Not Answered
Chosen Option : --

Q.10 What is the full form of SACS that implements The National Aids Control Organisation(NACO) programme at state level in India?

- Ans ☒ 1. Scheme for Aids Control in state
☒ 2. Society for Aids Control Scheme
☒ 3. State Aids Control Society
☒ 4. State Aids Prevention and Control Scheme

Question ID : 26433095236
Status : Not Answered
Chosen Option : --

Q.11 Who among the following was NOT a ruler of the Pallava dynasty?

- Ans ☒ 1. Mahendravarman I
☒ 2. Simhavishnu
☒ 3. Narasimhavarman I
☒ 4. Prabhakaravardhana

Question ID : 26433055607
Status : Not Answered
Chosen Option : --

Q.12 Which of the following Acts is also known as the 'Sarda Act'?

- Ans ☒ 1. Hindu Inheritance Act
☒ 2. Indian Slavery Act
☒ 3. Child Marriage Restraint Act
☒ 4. Hindu Widow Remarriage Act

Question ID : 26433055623
Status : Not Answered
Chosen Option : --

Q.13 How many sportspersons received the Arjuna Award for Outstanding Performance in Sports and Games in 2021?

- Ans ☒ 1. 22
☒ 2. 35
☒ 3. 33
☒ 4. 27


Question ID : 26433061809
Status : Not Answered
Chosen Option : --

Q.14 The festival of Holi is celebrated in the Hindu month of _____.

- Ans ☒ 1. Sravana
☒ 2. Ashadha
☒ 3. Magha
☒ 4. Phalguna

Question ID : 26433064322
Status : Not Answered
Chosen Option : --

Q.15 From 1 April 2021, the All-India Quarterly Establishment based Employment Survey (AQEES) has been taken up by the Labour Bureau to provide frequent (quarterly) updates about the employment and related variables of establishments, in both organised and unorganised segments of _____ selected sectors.

- Ans  1. 9
- ☒ 2. 11
- ☒ 3. 7
- ☒ 4. 5


Question ID : 26433061873
Status : Not Answered
Chosen Option : --

Q.16 In which of the following cities is HMT Unit located?

- Ans  1. Pinjore
- ☒ 2. Parwanoo
- ☒ 3. Panchkula
- ☒ 4. Panipat

Question ID : 26433066610
Status : Not Answered
Chosen Option : --

Q.17 When was the Industrial Policy Resolution of 1948 first officially documented in India?

- Ans ☒ 1. 15 August
-  2. 6 April
- ☒ 3. 10 May
- ☒ 4. 5 March

Question ID : 26433059274
Status : Not Answered
Chosen Option : --

Q.18 What is physiological density?

- Ans  1. Total population / Net cultivated area
- ☒ 2. Total agricultural population / Net cultivated area
- ☒ 3. Total population / Total area
- ☒ 4. Total agricultural population / Total area

Question ID : 26433054994
Status : Not Answered
Chosen Option : --

Q.19 According to Census 2001 and 2011 which state in India had the lowest density of population?

- Ans ☒ 1. Sikkim
- ☒ 2. Nagaland
-  3. Arunachal Pradesh
- ☒ 4. Manipur

Question ID : 26433067205
Status : Answered
Chosen Option : 3

Q.20 Rani ki Vav, built in the 11th century CE is a stepwell located in the Indian state of _____.

- Ans
- ☒ 1. Madhya Pradesh
 - ☒ 2. Rajasthan
 - ☒ 3. Gujarat
 - ☒ 4. Uttar Pradesh

Question ID : 26433064361
Status : Marked For Review
Chosen Option : 2




Section : Part-B-Quantitative Aptitude

Q.1 A, B and C can do a piece of work in 18 days, 24 days and 36 days, respectively. On the first day A is assisted by B, and on the second day C assists A. This 2-day cycle is repeated starting with A and B, till the work gets completed. How long (in days) would it take to complete the work?

- Ans
- ☒ 1. 11
 - ☒ 2. 12
 - ☒ 3. 13
 - ☒ 4. 10

Question ID : 26433061911
Status : Answered
Chosen Option : 1

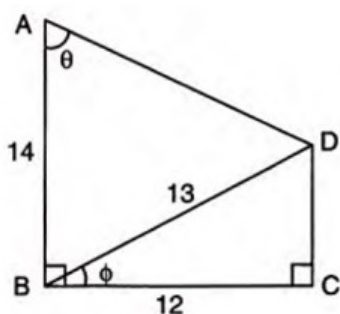
Q.2

- Ans
- ☒ 1. 
 - ☒ 2. 
 - ☒ 3. 
 - ☒ 4. $\frac{49\pi}{72}$

Question ID : 26433056881
Status : Answered
Chosen Option : 4

Q.3 Using the measurements given in the following figure,

the value of $\frac{\sin \phi + \tan \theta}{\sin \phi - \tan \theta}$ is _____.



Ans

☐ 1. $-\frac{7}{32}$

☐ 2. $\frac{7}{3}$

☐ 3. $\frac{6}{35}$

☒ 4. $-\frac{67}{37}$

Question ID : 26433061331

Status : Not Attempted and Marked For Review

Chosen Option : --

Q.4 If $a = \frac{1}{5}$ and $b^2 = 0.64$, where b is positive, then the value of the expression $5b(b + a)$ is ____.

Ans

☐ 1. 2

☒ 2. 4

☐ 3. 8

☐ 4. 6

Question ID : 26433066166

Status : Answered

Chosen Option : 2

Q.5 If $(x + y) = 7$, $xy = 4$, then what is the value of $x^3 + y^3$?

Ans

☐ 1. 251

☒ 2. 259

☐ 3. 279

☐ 4. 210

Question ID : 26433058995

Status : Answered

Chosen Option : 2

Q.6 Simplify the following:

$$\frac{(0.1)^2 + (0.01)^2 + (0.009)^2 + 2[0.1 \times 0.01 + 0.01 \times 0.009 + 0.009 \times 0.1]}{0.01 + 0.001 + 0.0009}$$

- Ans
- ☒ 1. 1.01
 - ☒ 2. 0.19
 - ☒ 3. 1.19
 - ☒ 4. 0.01

Question ID : 26433058453
Status : Answered
Chosen Option : 3

Q.7 A seller sells a laptop to Seema at the rate of ₹38,804 earning a 9% profit. He sells 2 mobile phones to Arjun, each at the rate of ₹13,875 earning a profit of 11% each. What is the total profit he earned on selling a laptop and 2 phones?

- Ans
- ☒ 1. ₹5,954
 - ☒ 2. ₹3,204
 - ☒ 3. ₹4,579
 - ☒ 4. ₹2,750

Question ID : 26433058787
Status : Answered
Chosen Option : 1

Q.8 30 mangos and 35 apples were purchased for Rs.885. If the price per apple is Rs.15, then what is the average price of a mango?

- Ans
- ☒ 1. Rs.15
 - ☒ 2. Rs.10
 - ☒ 3. Rs.11
 - ☒ 4. Rs.12

Question ID : 26433073079
Status : Answered
Chosen Option : 4

Q.9 In a certain time, a sum becomes 4 times of itself on simple interest at the rate of 10% per annum. What is the rate of interest if the same sum becomes 7 times of itself in the same duration?





- Ans
- ☒ 1. 5%
 - ☒ 2. 15%
 - ☒ 3. 10%
 - ☒ 4. 20%

Question ID : 26433074460
Status : Answered
Chosen Option : 4

Q.10 The given table shows the production of four types of bikes by a company from the year 2011 to 2015. Study the table and answer the following question.

Year/Type	2011	2012	2013	2014	2015
A	1032	1400	789	1478	545
B	1235	1521	938	1196	654
C	1152	1356	852	1350	210
D	1045	1589	951	1100	112

In which year was the production of type-B bike maximum?

- Ans  1. 2012
-  2. 2013
-  3. 2011
-  4. 2014





Question ID : 26433073095
Status : Answered
Chosen Option : 1

Q.11 Richa took a loan of ₹1,20,000 for 1 year at 20% per annum, compounded quarterly. The amount that Richa has to pay after 1 year is:

- Ans  1. ₹1,45,863.75
-  2. ₹1,45,862.75
-  3. ₹1,45,861.75
-  4. ₹1,45,860.75





Question ID : 26433058683
Status : Not Answered
Chosen Option : --

Q.12 The marked price of a mobile was Rs.4,800. The shop owner offered 10% trade discount on the marked price but on further request by the customer, he sold it at Rs.4,200 after giving a cash discount. How much is this cash discount in percentage (rounded off to 2 decimal places)?

- Ans  1. 2.21%
-  2. 2.52%
-  3. 2.78%
-  4. 2.36%

Question ID : 26433063938
Status : Answered
Chosen Option : 3

Q.13 Two trains of length 150 m and 250 m run on parallel lines. When they run in the same direction, it takes 20 seconds to cross each other and when they run in the opposite direction, it takes 10 seconds. The speeds of the two trains are:
(p = speed of first train in m/s, q = speed of second train in m/s)

- Ans  1. p = 10, q = 30
-  2. p = 35, q = 15
-  3. p = 25, q = 15
-  4. p = 30, q = 10

Question ID : 26433058151
Status : Answered
Chosen Option : 4

Q.14 6 pipes, working 10 hours a day, can empty a cistern in 3 days. How many hours a day must 9 pipes work to empty the cistern in one day?

- Ans
- ☒ 1. 18
 - ☒ 2. 12
 - ☒ 3. 20
 - ☒ 4. 22

Question ID : 26433058412
Status : Answered
Chosen Option : 3

Q.15 The difference between the two numbers is 22% of their sum. Find the ratio of the larger number to the smaller number.

- Ans
- ☒ 1. $\frac{62}{39}$
 - ☒ 2. $\frac{61}{39}$
 - ☒ 3. $\frac{39}{62}$
 - ☒ 4. $\frac{39}{61}$

Question ID : 26433063462
Status : Answered
Chosen Option : 2

Q.16 The volume of a right circular cylinder, if the radius of its base and the height are 7cm and 15cm, respectively, will be _____.

- Ans
- ☒ 1. 105 cm^3
 - ☒ 2. 154 cm^3
 - ☒ 3. 22 cm^3
 - ☒ 4. 2310 cm^3





Question ID : 26433061227
Status : Not Answered
Chosen Option : --

Q.17 In a company, Archit takes 15 days to finish a task, while Rohit can finish it in 25 days. They worked together for 5 days after which Rohit left the job. Archit may finish the remaining task in how many days?

- Ans
- ☒ 1. 8
 - ☒ 2. 5
 - ☒ 3. 7
 - ☒ 4. 6





Question ID : 26433063348
Status : Answered
Chosen Option : 3

Q.18 The LCM of 2 numbers is 80 and their HCF is 4. What is the other number if one number is 16?

- Ans  1. 20
-  2. 10
-  3. 24
-  4. 8





Question ID : 26433063282
Status : Answered
Chosen Option : 1

Q.19 Two consecutive natural numbers are always _____.

- Ans  1. prime numbers
-  2. odd numbers
-  3. even numbers
-  4. co-prime numbers

Question ID : 26433065045
Status : Answered
Chosen Option : 4





Q.20 The curved surface area of a cylinder with diameter 20 cm is 1320 cm^2 . What is the volume of the cylinder?

- Ans  1. 6800 cm^3
-  2. 6600 cm^3
-  3. 6000 cm^3
-  4. 6400 cm^3

Question ID : 26433056343
Status : Answered
Chosen Option : 2





Section : Part-C-General Intelligence

Q.1 A is the son of B. B is the son of C. D is the wife of C. E is the daughter of C. How is A related to E?

- Ans  1. Sister's son
-  2. Son
-  3. Brother
-  4. Brother's son

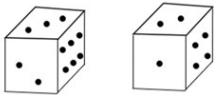
Question ID : 26433074720
Status : Answered
Chosen Option : 4

Q.2 In a code language, 'LOGIC' is coded as D61K and 'POWER' is coded as S920. How will 'MEDIA' be coded in the same language?

- Ans  1. B45L
-  2. N47Z
-  3. B47L
-  4. N42L

Question ID : 26433057825
Status : Not Answered
Chosen Option : --

Q.3 Two different positions of the same block are shown. When 2 dots are at the bottom, how many dots will be on the top?



- Ans
- ☒ 1. 3
 - ☒ 2. 1
 - ☒ 3. 5
 - ☒ 4. 4

Question ID : 26433065691
Status : Answered
Chosen Option : 3

Q.4 Select the option that is related to the fourth number in the same way as the first number is related to the second number and the fifth number is related to the sixth number.
130 : 5 :: ? : 6 :: 738 : 9

- Ans
- ☒ 1. 222
 - ☒ 2. 232
 - ☒ 3. 304
 - ☒ 4. 218

Question ID : 26433056479
Status : Answered
Chosen Option : 1

Q.5 Select the numbers from among the given options that can replace the question marks (?) in the following series.
94, 149, 204, 259, 314, ?, ?

- Ans
- ☒ 1. 354, 419
 - ☒ 2. 369, 414
 - ☒ 3. 369, 424
 - ☒ 4. 359, 412

Question ID : 26433057042
Status : Answered
Chosen Option : 3

Q.6 In this question, three statements are given, followed by two conclusions numbered I and II. Assuming the statements to be true, even if they seem to be at variance with commonly known facts, decide which of the conclusion(s) logically follow(s) from the statements.

Statements:
All tables are chairs.
Some chairs are foldables.
All foldables are beds.
Conclusions:
I. All beds are chairs.
II. All tables are foldables.

- Ans
- ☒ 1. Only conclusion II follows.
 - ☒ 2. Neither conclusion I nor II follows.
 - ☒ 3. Only conclusion I follows.
 - ☒ 4. Both conclusions I and II follow.

Question ID : 26433057921
Status : Answered
Chosen Option : 2

Q.7 Select the option that is related to the fifth letter cluster in the same way as the second letter cluster is related to the first letter cluster and the fourth letter cluster is related to the third letter cluster.
THVDU : KMMIL :: RHDQE : IMUVV :: YJDWB : ?

- Ans
- ☒ 1. GNHYE
 - ☒ 2. PBOSR
 - ☒ 3. GJLEB
 - ☐ 4. POUBS

Question ID : 26433074697
Status : Answered
Chosen Option : 4

Q.8 Three of the following letter-clusters are alike in some manner and hence form a group. Which letter-cluster does not belong to that group?

- Ans
- ☐ 1. EVCS
 - ☒ 2. DWBZ
 - ☒ 3. HSFV
 - ☒ 4. FUDX

Question ID : 26433056174
Status : Answered
Chosen Option : 2

Q.9 Select the combination of letters that when sequentially placed in the blanks of the given series, will complete the series.
FGHIG _ IF _ IF _ I _ GHF

- Ans
- ☒ 1. GHHG
 - ☒ 2. IHHG
 - ☒ 3. HGHG
 - ☐ 4. HHGF

Question ID : 26433057737
Status : Answered
Chosen Option : 4

Q.10 Select the correct combination of mathematical signs to sequentially replace the * signs and to balance the given equation.
 $16 * 4 * 236 * 2 * 105 = 20 * 10 * 183$

- Ans
- ☒ 1. +, x, +, -, ÷, -
 - ☐ 2. +, x, ÷, -, x, +
 - ☒ 3. ÷, -, x, -, +, -
 - ☒ 4. -, x, +, -, ÷, -

Question ID : 26433056522
Status : Answered
Chosen Option : 2

Q.11 Select the option that is related to the third term in the same way as the second term is related to the first term and the sixth term is related to the fifth term.
21 : 70 :: 13 : ? :: 19 : 64

- Ans
- ☒ 1. 52
 - ☒ 2. 50
 - ☒ 3. 46
 - ☒ 4. 58

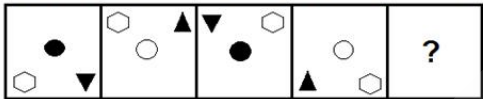
Question ID : 26433057066
Status : Answered
Chosen Option : 3

Q.12 Which of the following numbers will replace the question mark (?) in the given series?
94, 141, 118, ?, 142, 189, 166

- Ans
- ☒ 1. 165
 - ☒ 2. 170
 - ☒ 3. 168
 - ☒ 4. 172

Question ID : 26433057543
Status : Answered
Chosen Option : 1

Q.13 Select the figure from among the given options that can replace the question mark (?) in the following series.



Ans

- ☒ 1.
- ☒ 2.
- ☒ 3.
- ☒ 4.

Question ID : 26433055950
Status : Answered
Chosen Option : 4

Q.14 Six students are sitting around a circular table facing the centre. Harley is an immediate neighbour of both Ella and Cooper. Glen is sitting first to the right of Ella. Fred is sitting second to the left of Harley. Denis is an immediate neighbour of both Fred and Glen. Who is sitting between Cooper and Denis?

- Ans ☒ 1. Harley
☒ 2. Ella
☒ 3. Glen
☐ 4. Fred

Question ID : 26433076513
Status : Answered
Chosen Option : 4

Q.15 Select the option that is related to the fifth letter-cluster in the same way as the second letter-cluster is related to the first letter-cluster and the fourth letter-cluster is related to the third letter-cluster.
ACID : CGZW :: ADAM : LYAW :: AEON : ?

- Ans ☒ 1. MNBW
☒ 2. MNOP
☒ 3. NMBW
☐ 4. MMBW

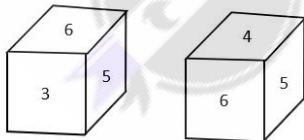
Question ID : 26433056402
Status : Answered
Chosen Option : 4

Q.16 Which letter cluster will replace the question mark(?) to complete the given series?
APZD, CRBF, ETDH, ?, IXHL

- Ans ☐ 1. GVFJ
☒ 2. GFVJ
☒ 3. GHIJ
☒ 4. GVJF

Question ID : 26433065585
Status : Answered
Chosen Option : 1

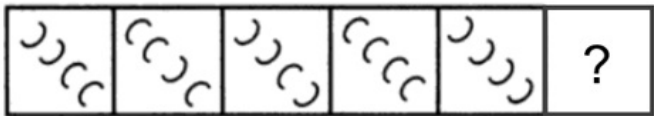
Q.17 Two different positions of the same dice are shown, the six faces of which are numbered from 1 to 6. Select the number that will be on the face opposite to the one showing 4.



- Ans ☐ 1. 3
☒ 2. 5
☒ 3. 1
☒ 4. 2

Question ID : 26433068025
Status : Answered
Chosen Option : 1

Q.18 Select the figure from among the given options that can replace the question mark (?) in the following series.

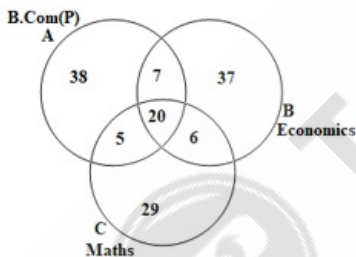


Ans

- 1.
- 2.
- 3.
- 4.

Question ID : 26433080538
Status : Answered
Chosen Option : 2

Q.19 Study the given diagram carefully and answer the question. The numbers in different sections indicate the number of persons.



How many B Com (P) students have opted for both Math and Economics?

Ans

1. 5
2. 6
3. 7
4. 20

Question ID : 26433069667
Status : Answered
Chosen Option : 4

Q.20 Which option represents the correct order of the given words as they would appear in an English dictionary?

- 1. Anywhere
- 2. Antipathy
- 3. Anticipation
- 4. Anyone
- 5. Antonym

Ans ☒ 1. 3, 2, 4, 5, 1

☒ 2. 3, 2, 5, 4, 1

☒ 3. 2, 3, 5, 4, 1

☒ 4. 3, 2, 1, 4, 5

Question ID : 26433057205

Status : Answered

Chosen Option : 2

Q.21 Eight people are sitting in two parallel rows containing four people each in such a way that there is equal distance between adjacent persons.

In the first row, C, D, E and F are seated and all of them are facing the south.

In the second row, T, U, V and W are seated and all of them are facing the north.

Thus, each person faces another person from the other row.

F is sitting third to the left of C. The person facing F is sitting second to the right of W, while the one facing V is sitting second to the left of C. The person facing E is sitting second to the left of U.

Who amongst the following faces T?

Ans ☒ 1. F

☒ 2. D

☒ 3. C

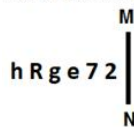
☒ 4. E

Question ID : 26433080719

Status : Answered

Chosen Option : 3

Q.22 Select the correct mirror image of the given figure when the mirror is placed at MN as shown below.



Ans ☒ 1.

☒ 2.

☒ 3.





☒ 4.

Question ID : 26433056993

Status : Answered





Chosen Option : 1

Q.23 In a certain code language, 'DRAMA' is written as 'COCTF' and 'QUEEN' is written as 'PGGWS'. How will 'WORLD' be written in that language?

- Ans  1. FNTQY
-  2. FNTRY
-  3. YQTNF
-  4. FNUQY




Question ID : 26433057264
Status : Answered
Chosen Option : 1

Q.24 Select the correct combination of mathematical signs to sequentially replace the * signs and to balance the given equation.
 $12 * 35 * 63 * 30 * 5 * 477$

- Ans  1. +, -, x, ÷, =
-  2. +, x, -, ÷, =
-  3. +, x, -, ÷, =
-  4. x, +, -, ÷, =

Question ID : 26433056449
Status : Answered
Chosen Option : 4

Q.25 Pointing towards Rena, Abhay said, "I am the only son of her mother's son." How is Rena related to Abhay?





- Ans  1. Father's sister's son
-  2. Father's sister
-  3. Mother
-  4. Brother's son

Question ID : 26433068012
Status : Answered
Chosen Option : 2

Section : Part-D- English Language

Q.1 Select the option that can be used as a one-word substitute for the given group of words.

One who has the qualities like shyness and openness at the same time

- Ans  1. Introvert
-  2. Extrovert
-  3. Ambivert
-  4. Intrepid

Question ID : 26433072391
Status : Answered
Chosen Option : 3

Q.2 The following sentence has been divided into parts. One of them may contain an error. Select the part that contains the error from the given options. If you don't find any error, mark 'No error' as your answer.

The bridegroom / looked at herself / in the mirror.

- Ans ☒ 1. The bridegroom
☒ 2. looked at herself
☒ 3. No error
☒ 4. in the mirror

Question ID : 26433061483
Status : Answered
Chosen Option : 2

Q.3 Select the most appropriate option that can substitute the underlined segment in the given sentence.

My friend gave me an explanation that seemed probable and reasonable behind declining the job offer he received.

- Ans ☒ 1. a detailed explanation
☒ 2. a plausible explanation
☒ 3. an aggravated explanation
☒ 4. an assumed explanation

Question ID : 26433072393
Status : Answered
Chosen Option : 1

Q.4 Select the most appropriate ANTONYM of the underlined word.

Sometimes, financial illiteracy and extravagance make a rich man very poor.

- Ans ☒ 1. Popularity
☒ 2. Inferiority
☒ 3. Introversion
☒ 4. Parsimony





Question ID : 26433063641
Status : Answered
Chosen Option : 2

Q.5 Select the most appropriate ANTONYM of the word cooperative from the given sentence: My mother always teaches me to be reciprocal, disciplined, and cooperative and these prevent to become unsupportive and selfish.

- Ans ☒ 1. reciprocal
☒ 2. prevent
☒ 3. unsupportive
☒ 4. selfish





Question ID : 26433058552
Status : Answered
Chosen Option : 3

Q.6 Select the most appropriate meaning of the given idiom.
Bite off more than you can chew

- Ans  1. To be too greedy for food
-  2. A heavy eater on occasions
-  3. Take on a project that you cannot finish
-  4. Accomplish targets on time

Question ID : 26433066126
Status : Marked For Review
Chosen Option : 3





Q.7 Choose the correctly spelt sentence.

- Ans  1. He bent down to retireve his new wallet.
-  2. The people tried to rertiieve food items in flood hit areas.
-  3. The police attempted to retrieve the queen's necklace from the garden.
-  4. Bunny could not retrive his rabbit due to bad weather.

Question ID : 26433072441
Status : Marked For Review
Chosen Option : 3

Q.8 Select the most appropriate homonym to fill in the blank.





In case of a snake_____, villagers in many places do not go to the hospital. They prefer witch doctors.

- Ans  1. bite
-  2. byte
-  3. bight
-  4. bait

Question ID : 26433058383
Status : Answered
Chosen Option : 1

Q.9 Select the most appropriate option that can substitute the underlined segment in the given sentence.

Tomorow, we have to submit our assignment.

- Ans  1. Toomorrow
-  2. Tomoroew
-  3. Tomorrow
-  4. Tommorow

Question ID : 26433058312
Status : Answered
Chosen Option : 3

Q.10 Select the most appropriate idiom or phrase to complete the given sentence.

I _____ after a good walk along the beach. The sea air really stimulates my appetite!

- Ans
- ☒ 1. eat like a bird
 - ☒ 2. have a full plate
 - ☒ 3. eat humble pie
 - ☒ 4. eat like a horse

Question ID : 26433056014
Status : Marked For Review
Chosen Option : 2

Q.11 Select the option that will improve the underlined part of the given sentence. In case no improvement is needed, select 'No improvement required'.
Russia has declared war on Ukraine.

- Ans
- ☒ 1. No improvement required
 - ☒ 2. will declared war
 - ☒ 3. had declare war
 - ☒ 4. was declared war

Question ID : 26433060756
Status : Marked For Review
Chosen Option : 4

Q.12 The following sentence has been divided into parts. One of them may contain an error. Select the part that contains the error from the given options. If you don't find any error, mark 'No error' as your answer.

The cows found their way / back to the farmhouse / on their own.

- Ans
- ☒ 1. No error
 - ☒ 2. back to the farmhouse
 - ☒ 3. The cows found their way
 - ☒ 4. on their own

Question ID : 26433061488
Status : Not Attempted and Marked For Review
Chosen Option : --

Q.13 Select the most appropriate synonym of the highlighted word.

This venture by this capitalist is a huge one.

- Ans
- ☒ 1. effort
 - ☒ 2. denture
 - ☒ 3. ploy
 - ☒ 4. undertaking

Question ID : 26433058293
Status : Marked For Review
Chosen Option : 4

Q.14 Select the option that can be used as a one-word substitute for the given group of words.

Science of speech sounds

- Ans ☒ 1. Plebian
☒ 2. Pioneer
☒ 3. Phonetics
☒ 4. Plaintiff

Question ID : 26433070716
Status : Answered
Chosen Option : 3

Q.15 Select the most appropriate option that can substitute the underlined segment in the given sentence.

I would gladly accompany you to Iceland if you had asked me.

- Ans ☒ 1. I will gladly accompany you
☒ 2. I would have gladly accompanied you
☒ 3. I was to have gladly accompanied you
☒ 4. I will have gladly accompany you

Question ID : 26433065176
Status : Marked For Review
Chosen Option : 2

Q.16 Sentences of a paragraph are given below in jumbled order. Arrange the sentences in the correct order to form a meaningful and coherent paragraph.

- A. Autism spectrum disorders (ASD) are a range of psychological conditions characterised by abnormalities in social interaction, behaviour, interests and communication.
B. Although the number of reported cases of ASD has experienced a dramatic increase in the past 25 years, the majority of doctors agree that this increase is due to changes in diagnostic practices and advances in the understanding of psychiatric health.
C. The five forms of ASD include classical autism, Asperger's syndrome, Pervasive Developmental Disorder, Rett syndrome and Childhood Disintegrative Disorder.
D. While there is no general consensus among medical professionals about the underlying causes of ASD, theories range from genetic inheritance to environmental factors.

- Ans ☒ 1. ABCD
☒ 2. DABC
☒ 3. CADB
☒ 4. ACBD

Question ID : 26433060728
Status : Answered
Chosen Option : 4

Q.17 Select the most appropriate synonym of the highlighted word.





The word has been used here in a very facile manner.

- Ans ☒ 1. Shallow
☒ 2. Lazy
☒ 3. Hollow
☒ 4. Cunning

Question ID : 26433058289
Status : Marked For Review
Chosen Option : 4

Q.18 Select the option that can be used as a one-word substitute for the given group of words.





Someone who is friendly and good natured

- Ans  1. Amicable
-  2. Kind
-  3. Magnanimous
-  4. Principled

Question ID : 26433072321
Status : Not Attempted and Marked For Review
Chosen Option : --





Q.19 Select the most appropriate option that can substitute the underlined part in the given sentence.

To make my parents agree to purchase a branded smartphone is like cracking a hard nut.

- Ans  1. a problem which cannot be easily solved
-  2. an obstinate person
-  3. adamant
-  4. a dry fruit like walnut

Question ID : 26433072483
Status : Answered
Chosen Option : 1

Q.20 Select the most appropriate synonym of the underlined word in the given sentence.
Bipul has the habit of asking same questions repetitively which often becomes annoying.

- Ans  1. offending
-  2. soothing
-  3. calming
-  4. disturbing

Question ID : 26433058540
Status : Marked For Review
Chosen Option : 4




Comprehension:

In the following passage, some words have been deleted. Read the passage carefully and select the most appropriate option to fill in each blank.

Grammarians fall (1) _____ two groups. The prescriptive grammarians favour the use of rules (2) _____ prescribe the elegance of the language. (3) _____ not the standard be degraded by usage, they say. The descriptive grammarians hold that the duty of any grammarian is to analyse objectively and (4) _____ the manner in which words and phrases are used. Let him be concerned (5) _____ who uses what under which conditions.

SubQuestion No : 21

Q.21 Select the most appropriate option to fill in blank number 1.

- Ans  1. with
-  2. into
-  3. of
-  4. at

Question ID : 26433072499
Status : Answered
Chosen Option : 2





Comprehension:

In the following passage, some words have been deleted. Read the passage carefully and select the most appropriate option to fill in each blank.

Grammarians fall (1) _____ two groups. The prescriptive grammarians favour the use of rules (2) _____ prescribe the elegance of the language. (3) _____ not the standard be degraded by usage, they say. The descriptive grammarians hold that the duty of any grammarian is to analyse objectively and (4) _____ the manner in which words and phrases are used. Let him be concerned (5) _____ who uses what under which conditions.

SubQuestion No : 22

Q.22 Select the most appropriate option to fill in blank number 2.

- Ans  1. due to
-  2. in order to
-  3. so that
-  4. because

Question ID : 26433072500
Status : Answered
Chosen Option : 2





Comprehension:

In the following passage, some words have been deleted. Read the passage carefully and select the most appropriate option to fill in each blank.

Grammarians fall (1) _____ two groups. The prescriptive grammarians favour the use of rules (2) _____ prescribe the elegance of the language. (3) _____ not the standard be degraded by usage, they say. The descriptive grammarians hold that the duty of any grammarian is to analyse objectively and (4) _____ the manner in which words and phrases are used. Let him be concerned (5) _____ who uses what under which conditions.

SubQuestion No : 23

Q.23 Select the most appropriate option to fill in blank number 3.

- Ans  1. Do
-  2. Although
-  3. Let
-  4. Should

Question ID : 26433072501
Status : Answered
Chosen Option : 1





Comprehension:

In the following passage, some words have been deleted. Read the passage carefully and select the most appropriate option to fill in each blank.

Grammarians fall (1) _____ two groups. The prescriptive grammarians favour the use of rules (2) _____ prescribe the elegance of the language. (3) _____ not the standard be degraded by usage, they say. The descriptive grammarians hold that the duty of any grammarian is to analyse objectively and (4) _____ the manner in which words and phrases are used. Let him be concerned (5) _____ who uses what under which conditions.

SubQuestion No : 24

Q.24 Select the most appropriate option to fill in blank number 4.

- Ans  1. compare
-  2. contrast
-  3. answer
-  4. describe

Question ID : 26433072502
Status : Marked For Review
Chosen Option : 1





Comprehension:

In the following passage, some words have been deleted. Read the passage carefully and select the most appropriate option to fill in each blank.

Grammarians fall (1) _____ two groups. The prescriptive grammarians favour the use of rules (2) _____ prescribe the elegance of the language. (3) _____ not the standard be degraded by usage, they say. The descriptive grammarians hold that the duty of any grammarian is to analyse objectively and (4) _____ the manner in which words and phrases are used. Let him be concerned (5) _____ who uses what under which conditions.

SubQuestion No : 25




Q.25 Select the most appropriate option to fill in blank number 5.

- Ans  1. for
-  2. from
-  3. at
-  4. with

Question ID : 26433072503
Status : Answered
Chosen Option : 3




Section : Part-E- Computer Fundamentals

Q.1 In MS-Excel 2010, to select two or more non-adjacent worksheets, click the tab for first worksheet, then hold down the _____ key on your keyboard while you click the tabs of the other sheets you want to select.

- Ans  1. Ctrl
-  2. Tab
-  3. Esc
-  4. Alt


Question ID : 26433095299
Status : Answered
Chosen Option : 1

Q.2 Which of the following command is used in MS-Word 2010 to open the file page to use backstage view?

- Ans  1. Alt + G
-  2. Alt + H
-  3. Alt + C
-  4. Alt + F

Question ID : 26433095291
Status : Not Answered
Chosen Option : --

Q.3 Which of the following shortcut key is used to apply superscript formatting in MS-Word 2010?

- Ans  1. Ctrl + Shift + >
-  2. Ctrl + Shift + +
-  3. Ctrl + Shift + <
-  4. Ctrl + Shift + =





Question ID : 26433095501
Status : Marked For Review
Chosen Option : 2

Q.4 Which of the following keyboard shortcut is used to move the cursor up one paragraph in MS-Word 2010?

- Ans  1. Ctrl + Up arrow key
-  2. Ctrl + Left arrow key
-  3. Ctrl + Right arrow key
-  4. Ctrl + Down arrow key





Question ID : 26433095301
Status : Marked For Review
Chosen Option : 1

Q.5 Choose the wrong option with respect to MS-Excel 2010:

- Ans  1. In MS-Excel 2010, we can save the file by using F2
-  2. In MS-Excel 2010, we can insert comments to a cell
-  3. In MS-Excel 2010, to open an existing file Ctrl+O is used
-  4. In MS-Excel 2010, we can insert a table from the insert tab





Question ID : 26433095434
Status : Marked For Review
Chosen Option : 2

Q.6 Which of the following is not an Internet etiquette?

- Ans  1. Using abbreviations wisely
-  2. Forwarding unwanted messages
-  3. Size of attachments need to be small
-  4. Including name at the bottom of mails





Question ID : 26433095336
Status : Answered
Chosen Option : 2

Q.7 Which of the following MS-Excel 2010 function is used to converts a date that is stored as text to a serial number that Excel recognizes as a date?

- Ans  1. EDATE()
-  2. TODAY()
-  3. DATEVALUE()
-  4. NETWORKDAYS()





Question ID : 26433095510
Status : Answered
Chosen Option : 2

Q.8 Which of the following search engine is dominating market with maximum number of searches on it?

- Ans  1. Yahoo
-  2. Bing
-  3. Ask.com
-  4. Google





Question ID : 26433095377
Status : Answered
Chosen Option : 4

Q.9 Which of the following is not a part of an email address?

- Ans  1. @ Symbol
-  2. Email provider's domain
-  3. Username
-  4. User domain

Question ID : 26433095295
Status : Answered
Chosen Option : 4

Q.10 _____ function In MS-Excel changes all the characters of the text To UpperCase.

- Ans  1. PROPER
-  2. LEN
-  3. UPPER
-  4. LOWER

Question ID : 26433095480
Status : Answered
Chosen Option : 1

