



Teachingninja.in



Latest Govt Job updates



Private Job updates



Free Mock tests available

Visit - teachingninja.in



Delhi Police Head Constable

**Previous Year Paper
(Ministerial) 18 Oct 2022
Shift 1**



Head Constable Ministerial in Delhi Police Examination 2022

Roll Number	
Candidate Name	
Venue Name	
Exam Date	18/10/2022
Exam Time	9:00 AM - 10:30 AM
Subject	Head Constable Ministerial in Delhi Police Examination 2022

Section : Part-A-General Awareness

Q.1 Consider the various parallel Himalayan ranges. The correct order according to their increasing altitude is:

- 1)The Shiwaliks
- 2)The Himachal
- 3)The Greater Himalayas

Ans ☒ 1. 3-1-2
☒ 2. 2-1-3
☒ 3. 1-2-3
☒ 4. 3-2-1

Question ID : 26433055318
Status : Answered
Chosen Option : 2

Q.2 What does M stand for in the MUDRA Scheme?

Ans ☒ 1. Micro
☒ 2. Money
☒ 3. Monetary
☒ 4. Macro

Question ID : 26433059238
Status : Not Attempted and Marked For Review
Chosen Option : --

Q.3 'Saila' is a folk dance which is performed with bamboo sticks in _____.

Ans ☒ 1. Manipur
☒ 2. Ladakh
☒ 3. Chhattisgarh
☒ 4. Kerala

Question ID : 26433064298
Status : Answered
Chosen Option : 1

Q.4 Sonalika is a HYV of which foodgrain?

- Ans
- ☐ 1. Rice
 - ☐ 2. Maize
 - ☒ 3. Wheat
 - ☐ 4. Corn

Question ID : 26433059286
Status : Answered
Chosen Option : 3

Q.5 Who among the following was given the title of Malikut-Tujjar, 'Chief of the Merchants' by the Bahamani ruler Humayun Shah?

- Ans
- ☒ 1. Mahmud Gawan
 - ☐ 2. Behram Shah
 - ☐ 3. Haran Kangu
 - ☐ 4. Mohammed Shah

Question ID : 26433064604
Status : Answered
Chosen Option : 2

Q.6 Who established the Gadar party in 1913 and made efforts for armed revolution in India?

- Ans
- ☐ 1. Subhash Chandra Bose
 - ☒ 2. Lala Hardayal
 - ☐ 3. Lala Lajpat Roy
 - ☐ 4. Chandrashekhar Azad

Question ID : 26433054291
Status : Answered
Chosen Option : 1

Q.7 Which of the following crops is a commercial crop in Haryana and Punjab, but is a subsistence crop in Odisha?

- Ans
- ☐ 1. Green gram
 - ☐ 2. Sugarcane
 - ☒ 3. Rice
 - ☐ 4. Millet

Question ID : 26433071576
Status : Answered
Chosen Option : 3

Q.8 As of 26 January 2021, who among the following is the Minister for Road Transport & Highways in the Government of India?

- Ans
- ☐ 1. Bhagwat Kishanrao Karad
 - ☐ 2. Rajkumar Ranjan Singh
 - ☐ 3. Kapil Moreswar Patil
 - ☒ 4. Nitin Jairam Gadkari

Question ID : 26433061793
Status : Not Attempted and Marked For Review
Chosen Option : --

Q.9 निम्नलिखित में से किस योजना को 'आजीविका' के नाम से भी जाना जाता है?

- Ans ☒ 1. राष्ट्रीय ग्रामीण आजीविका मिशन
☒ 2. राष्ट्रीय शहरी रोजगार मिशन
☒ 3. राष्ट्रीय पिछड़ा वर्ग रोजगार मिशन
☒ 4. राष्ट्रीय ग्रामीण रोजगार मिशन

Question ID : 26433066606
Status : Answered
Chosen Option : 1

Q.10 How many Fundamental Duties were initially recommended by the Swaran Singh Committee, appointed to look into it?

- Ans ☒ 1. 8
☒ 2. 7
☒ 3. 9
☒ 4. 10

Question ID : 26433054892
Status : Not Answered
Chosen Option : --

Q.11 Which of the following deities is worshipped on the occasion of the Malayalam New Year?

- Ans ☒ 1. Lord Ganesha
☒ 2. Lord Brahma
☒ 3. Lord Indra
☒ 4. Lord Vishnu

Question ID : 26433069905
Status : Not Answered
Chosen Option : --

Q.12 श्रम और रोजगार मंत्री ने _____ 2021 में घरेलू कामगारों पर पहले अखिल भारतीय सर्वेक्षण को झंडी दिखाई, जिसे एक साल में पूरा किए जाने का प्रस्ताव था।

- Ans ☒ 1. जुलाई
☒ 2. अक्टूबर
☒ 3. सितंबर
☒ 4. नवंबर

Question ID : 26433061804
Status : Answered
Chosen Option : 4

Q.13 Evidence of a ploughed field has been found in which of the following sites of the Indus Valley Civilisation?

- Ans ☒ 1. Kalibangan
☒ 2. Banawali
☒ 3. Lothal
☒ 4. Mohenjo-Daro

Question ID : 26433064348
Status : Answered
Chosen Option : 1

Q.14 Who advocated that India would be truly independent only when the poorest of its people become free of human suffering?

- Ans
- ☒ 1. Jawaharlal Nehru
 - ☒ 2. Indira Gandhi
 - ☒ 3. Subhash Chandra Bose
 - ☒ 4. Mahatma Gandhi

Question ID : 26433081928
Status : Answered
Chosen Option : 2

Q.15 Meningitis is an inflammation of the fluid and membranes of which of the following organs?

- Ans
- ☒ 1. Brain
 - ☒ 2. Liver
 - ☒ 3. Kidney
 - ☒ 4. Intestine

Question ID : 26433095251
Status : Answered
Chosen Option : 1

Q.16 The Uttar Pradesh Assembly elections of 2022 were held in how many phases?

- Ans
- ☒ 1. five
 - ☒ 2. eight
 - ☒ 3. four
 - ☒ 4. seven

Question ID : 26433061826
Status : Answered
Chosen Option : 4

Q.17 Under which of the following Acts of British India, was a Board of Control established in Britain, and a dual system of governance imposed on British India by the British government and the East India Company?

- Ans
- ☒ 1. Indian Contract Act, 1872
 - ☒ 2. Charter Act, 1813
 - ☒ 3. Charter Act, 1793
 - ☒ 4. Pitt's India Act, 1784

Question ID : 26433065537
Status : Answered
Chosen Option : 4

Q.18 The Major Dhyan Chand Khel Ratna Award 2021 was given to _____ sportspersons.

- Ans
- ☒ 1. 9
 - ☒ 2. 12
 - ☒ 3. 15
 - ☒ 4. 18

Question ID : 26433061808
Status : Answered
Chosen Option : 4

Q.19 Which of the following is a space tech startup that has developed India's first In-orbit Space Debris Monitoring and tracking system based on the LIDAR (Light Detection and Ranging) technology?

- Ans
- ☒ 1. Dhruva
 - ☒ 2. Pixxel
 - ☒ 3. Agnikul
 - ☒ 4. Digiantra Research and Technology (DRT)

Question ID : 26433095271
Status : Not Answered
Chosen Option : --

Q.20 What is Repo Rate in India?

- Ans
- ☒ 1. The rate at which the Reserve Bank of India (RBI) borrows money from commercial banks for a long term.
 - ☒ 2. The rate at which the Reserve Bank of India (RBI) borrows money from commercial banks for a short term.
 - ☒ 3. The rate at which commercial banks borrow money by selling their securities to the Reserve Bank of India (RBI) for a short term.
 - ☒ 4. The rate at which commercial banks borrow money by selling their securities to the Reserve Bank of India (RBI) for a long term.

Question ID : 26433064499
Status : Answered
Chosen Option : 3

Section : Part-B-Quantitative Aptitude

Q.1 Choose the INCORRECT statement from the following options.

- Ans
- ☒ 1. The LCM of two co-prime numbers is always their product.
 - ☒ 2. The HCF of two co-prime numbers is always 1.
 - ☒ 3. 1 forms a co-prime number pair with every prime number.
 - ☒ 4. Two even numbers can become co-prime numbers.

Question ID : 26433075094
Status : Answered
Chosen Option : 4

Q.2 The surface area of a sphere is 1386 cm^2 . What is 40% of its diameter (in cm)?

(Take $\pi = \frac{22}{7}$)

- Ans
- ☒ 1. 8.4
 - ☒ 2. 10.5
 - ☒ 3. 6.3
 - ☒ 4. 4.2

Question ID : 26433063260
Status : Not Attempted and Marked For Review
Chosen Option : --

Q.3 The average weight of 16 crewmen in a boat is increased by $\frac{1}{4}$ kg when one of the crewmen, whose weight is 50 kg, is replaced by new man. What is the weight of the new man?

- Ans**
- ☒ 1. 52 kg
 - ☒ 2. 54 kg
 - ☒ 3. 55 kg
 - ☒ 4. 53 kg

Question ID : 26433064003

Status : Not Attempted and Marked For Review

Chosen Option : --

Q.4 एक टेलीविजन के अंकित मूल्य पर 12%, 18% और 24% की क्रमिक छूट के लिए एकल समतुल्य छूट क्या है? (2 दशमलव स्थानों तक सही)

- Ans**
- ☒ 1. 34.18%
 - ☒ 2. 48.64%
 - ☒ 3. 45.16%
 - ☒ 4. 54.25%

Question ID : 26433063702

Status : Not Attempted and Marked For Review

Chosen Option : --

Q.5 Anand invested a sum of money in a bank on simple interest at the rate of 8% p.a. The sum of money amounts to Rs.1,680 in 5 years, while it amounts to Rs.2,064 in 9 years. How much money (in Rs.) did he invest?

- Ans**
- ☒ 1. Rs.1,250
 - ☒ 2. Rs.1,150
 - ☒ 3. Rs.1,100
 - ☒ 4. Rs.1,200

Question ID : 26433063336

Status : Not Attempted and Marked For Review

Chosen Option : --

Q.6 Simplify the following expression.

$$\sqrt{\frac{0.081 \times 0.64 \times 0.09 \times 0.021}{0.00007 \times 0.00003}}$$

- Ans**
- ☒ 1. 512
 - ☒ 2. 216
 - ☒ 3. 324
 - ☒ 4. 729

Question ID : 26433063673

Status : Not Attempted and Marked For Review

Chosen Option : --

Q.7 An ice-cream seller needs to find out the volume of an ice-cream cone having a radius of 12 cm and height of 21 cm?
(Take $\pi = \frac{22}{7}$)

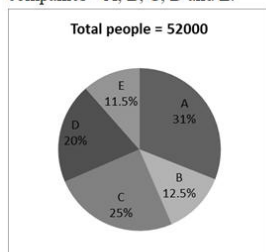
- Ans**
- ☒ 1. 3268 cm³
 - ☒ 2. 3188 cm³
 - ☒ 3. 3168 cm³
 - ☒ 4. 3078 cm³

Question ID : 26433058252

Status : Not Attempted and Marked For Review

Chosen Option : --

Q.8 The given pie chart represents the percentage of people in a city who are interested to buy the laptop of five different companies – A, B, C, D and E.



What is the ratio of the number of people interested to buy company B's laptop to the number of people interested to buy company E's laptop?

- Ans**
- ☒ 1. 25 : 23
 - ☒ 2. 25 : 31
 - ☒ 3. 23 : 25
 - ☒ 4. 31 : 25

Question ID : 26433073103

Status : Not Attempted and Marked For Review

Chosen Option : --

Q.9 A man, a woman and a boy can complete a job in 3, 5 and 15 days respectively. When working together, how many boys must assist one man and one woman to complete the work in $\frac{1}{4}$ of a day?

- Ans**
- ☒ 1. 58
 - ☒ 2. 63
 - ☒ 3. 52
 - ☒ 4. 60

Question ID : 26433063801

Status : Not Attempted and Marked For Review

Chosen Option : --

Q.10 Vijay can chop all the vegetables available in 4 minutes lesser time than Bishaka. If both of them work together, they take 288 seconds to chop all the vegetables. How long does Vijay alone take to chop all the vegetables?

- Ans**
- ☒ 1. 8 minutes
 - ☒ 2. 6 minutes
 - ☒ 3. 7 minutes
 - ☒ 4. 9 minutes

Question ID : 26433061319

Status : Not Attempted and Marked For Review

Chosen Option : --

Q.11 What is the time taken by a 225 m long train running at 54 km/h to cross a man standing on a platform?

- Ans
- ☒ 1. 12 seconds
 - ☒ 2. 15 seconds
 - ☒ 3. 4.5 seconds
 - ☒ 4. 4.16 seconds

Question ID : 26433058150

Status : Not Attempted and Marked For Review

Chosen Option : --

Q.12 If the price of rice is raised by 28%, then by how much per cent should a person reduce his consumption of rice, so that his expenditure remains the same?

- Ans
- ☒ 1. 23.875%
 - ☒ 2. 22.875%
 - ☒ 3. 24.875%
 - ☒ 4. 21.875%

Question ID : 26433063386

Status : Not Attempted and Marked For Review

Chosen Option : --

Q.13 What is the value of 'a' for the given expression, if $(x + y + z) \neq 0$?

$$\frac{x}{3x + y + z} = \frac{y}{x + 3y + z} = \frac{z}{x + y + 3z} = 2a$$

- Ans
- ☒ 1. $\frac{1}{15}$
 - ☒ 2. $\frac{1}{10}$
 - ☒ 3. $\frac{1}{5}$
 - ☒ 4. $\frac{1}{2}$

Question ID : 26433058831

Status : Not Attempted and Marked For Review

Chosen Option : --

Q.14 If $x^8 - 32x^4 + 256 = 0$, then the positive value of $\left(x^2 + \frac{1}{x^2}\right)$ is:

- Ans
- ☒ 1. 2.25
 - ☒ 2. 5.75
 - ☒ 3. 3.75
 - ☒ 4. 4.25

Question ID : 26433061950

Status : Not Attempted and Marked For Review

Chosen Option : --

Q.15 Determine the missing figure (denoted by *), in the following equation.

$$15\frac{3}{5} \times \frac{*}{3} = 26$$

Ans ☒ 1. 15

☒ 2. 5

☒ 3. 45

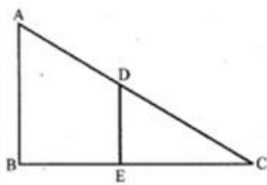
☒ 4. 55

Question ID : 26433065042

Status : Answered

Chosen Option : 2

Q.16 In the figure, If $AB \parallel DE$; $AB = 8$ cm, $DE = 6$ cm and $AC = 18$ cm; and DE is perpendicular to BC ; then the ratio $AB : CD$ is:



Ans ☒ 1. 9 : 4

☒ 2. 4 : 3

☒ 3. 16 : 27

☒ 4. 3 : 4

Question ID : 26433061601

Status : Not Answered

Chosen Option : --

Q.17 Ramesh borrowed ₹1,20,000 interest free from Aman. If he pays back 6.25% of this amount quarterly and has already paid ₹30,000, then for how many months does he need to pay back his loan for the rest of the amount?

Ans ☒ 1. 42 months

☒ 2. 24 months

☒ 3. 36 months

☒ 4. 38 months

Question ID : 26433061737

Status : Not Answered

Chosen Option : --

Q.18 If a is the mean proportional between 4 and 9 and b is the mean proportional between $2a$ and 48, then the value of $5b - 9a$ is _____.

Ans ☒ 1. 22

☒ 2. 44

☒ 3. 88

☒ 4. 66

Question ID : 26433061309

Status : Not Answered

Chosen Option : --

Q.19 A person sold his book for ₹96 and got a percentage profit equal to the cost price of the book. The cost price of the book is:

- Ans
- ☒ 1. ₹70
 - ☒ 2. ₹80
 - ☒ 3. ₹50
 - ☒ 4. ₹60

Question ID : 26433058965
Status : Not Answered
Chosen Option : --

Q.20 The value of $\frac{\sec\theta(\sin\theta - 2\sin^2\theta)}{2\cos^2\theta - \cos\theta}$ is:

- Ans
- ☒ 1. $\sin\theta.\cos\theta$
 - ☒ 2. $\tan\theta.\cos\theta$
 - ☒ 3. $\sec\theta.\tan\theta$
 - ☒ 4. $\sec\theta\sin\theta$

Question ID : 26433058174
Status : Not Answered
Chosen Option : --

Section : Part-C-General Intelligence

Q.1 Select the option that is related to the fifth letter cluster in the same way as the second letter cluster is related to the first letter cluster and the fourth letter cluster is related to the third letter cluster.

RJB : NFX :: ICK : EYG :: DYI : ?

- Ans
- ☒ 1. BYQ
 - ☒ 2. GTZ
 - ☒ 3. ZUE
 - ☒ 4. LPS

Question ID : 26433074679
Status : Answered
Chosen Option : 3

Q.2 Which option represents the correct order of the given words as they would appear in an English dictionary?

1. Comma
2. Comet
3. Comfort
4. Comedy
5. Combine

- Ans
- ☒ 1. 5, 4, 2, 3, 1
 - ☒ 2. 4, 5, 2, 3, 1
 - ☒ 3. 5, 4, 2, 1, 3
 - ☒ 4. 5, 2, 4, 3, 1

Question ID : 26433057208
Status : Answered
Chosen Option : 1

Q.3 Select the number from among the given options that can replace the question mark (?) in the following series.
219, 197, 173, ?, 111, 69

- Ans
- ☒ 1. 150
 - ☒ 2. 142
 - ☒ 3. 147
 - ☒ 4. 145

Question ID : 26433057054

Status : Marked For Review

Chosen Option : 4

Q.4 Six letters U, V, W, X, Y and Z are written on different faces of a dice. Two positions of this dice are shown in the figure. Find the letter on the face opposite to Y.



- Ans
- ☒ 1. W
 - ☒ 2. V
 - ☒ 3. Z
 - ☒ 4. X

Question ID : 26433057864

Status : Answered

Chosen Option : 4

Q.5 Which two signs should be interchanged to make the given equation correct?
 $49 + 60 \times 12 - 8 \div 4 = 22$

- Ans
- ☒ 1. \times and \div
 - ☒ 2. $-$ and \div
 - ☒ 3. $+$ and $-$
 - ☒ 4. $+$ and \times

Question ID : 26433056857

Status : Answered

Chosen Option : 1

Q.6 Which two groups of numbers should be interchanged to balance the given equation?
 $741 \div 19 + 13 \times 3 - 260 + 524 = 10 \times 8 + 25 \times 16$

- Ans
- ☒ 1. (741 and 260), and (10 and 16)
 - ☒ 2. (3 and 19), and (741 and 524)
 - ☒ 3. (13 and 19), and (8 and 25)
 - ☒ 4. (260 and 524), and (10 and 25)

Question ID : 26433056529

Status : Not Attempted and
Marked For Review

Chosen Option : --

Q.7 Pointing to a picture of a woman, Shakuntala said, "She is the daughter of my father's grandmother." How is the woman related to Shakuntala?

Ans ☒ 1. Father's Father's Sister

☐ 2. Father's Mother

☐ 3. Mother

☐ 4. Sister

Question ID : 26433057709

Status : Answered

Chosen Option : 1

Q.8 Three of the following letter-clusters are alike in some manner and hence form a group. Which letter-cluster does not belong to that group?

Ans ☒ 1. DWBU

☐ 2. EVCX

☐ 3. BYZA

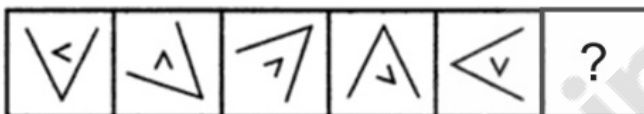
☐ 4. GTEV

Question ID : 26433056172

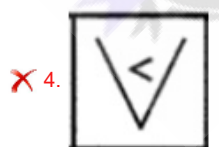

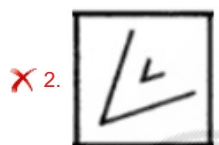
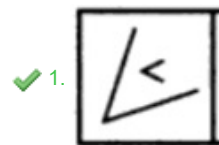
Status : Marked For Review

Chosen Option : 3

Q.9 Select the figure from among the given options that can replace the question mark (?) in the following series.



Ans

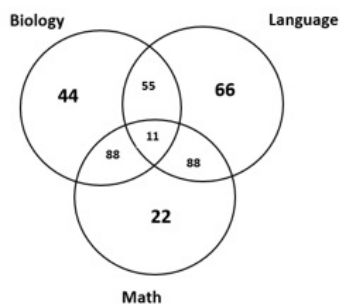


Question ID : 26433080531

Status : Answered

Chosen Option : 2

Q.10 Study the given diagram carefully and answer the questions. The numbers in different sections indicate the number of students who passed in different subjects.
How many students passed in language but failed in biology?



- Ans
- ☒ 1. 132
 - ☒ 2. 121
 - ☒ 3. 110
 - ☒ 4. 154

Question ID : 26433069369
Status : Answered
Chosen Option : 4

Q.11 Six students are sitting around a circular table facing the centre. Harsha is an immediate neighbour of both Ajay and Anjali. Dhruv is sitting first to the left of Anjali. Sahil is sitting third to the right of Harsha. Divya is an immediate neighbour of both Ajay and Sahil. Who is sitting between Harsha and Dhruv?

- Ans
- ☒ 1. Sahil
 - ☒ 2. Divya
 - ☒ 3. Ajay
 - ☒ 4. Anjali

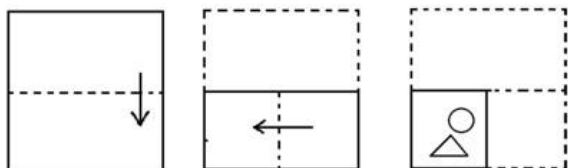
Question ID : 26433076517
Status : Answered
Chosen Option : 4

Q.12 Which of the following numbers will replace the question mark (?) in the given series?
5, 8, 12, 18, 28, ?

- Ans
- ☒ 1. 48
 - ☒ 2. 46
 - ☒ 3. 52
 - ☒ 4. 50

Question ID : 26433057554
Status : Not Attempted and Marked For Review
Chosen Option : --

Q.13 The sequence of folding a piece of paper and the manner in which the folded paper has been cut is shown below. Select the figure which would most closely resemble the unfolded form of the paper.



Ans

- ✗ 1.
- ✗ 2.
- ✗ 3.
- ✓ 4.

Question ID : 26433056680

Status : Answered

Chosen Option : 4

Q.14 U is the mother of S. Q is the sister-in-law of S and the wife of R. P is father of R. If S is the wife of T, how is P related to T?

- Ans ✗ 1. Son-in-law
- ✓ 2. Father-in-law
- ✗ 3. Brother
- ✗ 4. Brother-in-law

Question ID : 26433068808

Status : Answered

Chosen Option : 2

Q.15 Select the option that is related to the third term in the same way as the second term is related to the first term and the sixth term is related to the fifth term.
88 : 139 :: 65 : ? :: 93 : 144

- Ans ☒ 1. 116
☒ 2. 119
☒ 3. 120
☒ 4. 112

Question ID : 26433057564
Status : Answered
Chosen Option : 1

Q.16 In a code language, 'SCENE' is coded as D31T and 'PRESS' is coded as R62Q. How will 'USAGE' be coded in the same language?

- Ans ☒ 1. T38D
☒ 2. D26V
☒ 3. D38V
☒ 4. D34T

Question ID : 26433057827
Status : Not Attempted and Marked For Review
Chosen Option : --

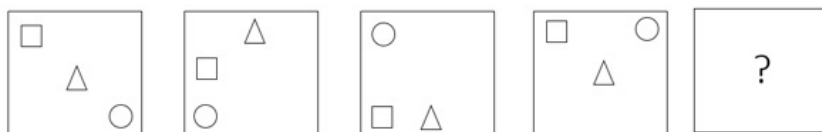
Q.17 In a code language, 'BLUE' is coded as 160, and 'GREEN' is coded as 245. How will 'ORANGE' be coded in the same language?

- Ans ☒ 1. 360
☒ 2. 420
☒ 3. 390
☒ 4. 300

Question ID : 26433057770
Status : Not Attempted and Marked For Review
Chosen Option : --



Q.18 Select the figure from among the given options that can replace the question mark (?) in the following series.



Ans

- ✗ 1.
- ✗ 2.
- ✓ 3.
- ✗ 4.

Question ID : 26433068713

Status : Answered

Chosen Option : 3

Q.19 Read the given statements and conclusions carefully. Assuming that the information given in the statements is true, even if it appears to be at variance with commonly known facts, decide which of the given conclusions logically follow(s) from the statements.

Statements:

Some kits are solutions.

Some solutions are sticks.

All sticks are poems.

Conclusions:

I. Some poems are solutions.

II. Some sticks are kits.

III. No stick is a kit.

IV. Some solutions are kits

- Ans ✗ 1. Only conclusions II and IV follow
- ✓ 2. Only conclusions I and IV and either conclusion II or III follow
- ✗ 3. Only conclusions I and II follow
- ✗ 4. Only conclusions II and III follow

Question ID : 26433079075

Status : Answered

Chosen Option : 2

Q.20 Select the option that is related to the fifth letter-cluster in the same way as the second letter-cluster is related to the first letter-cluster and the fourth letter-cluster is related to the third letter-cluster.

DAIRY : TXOGY :: MILKY : KPLNY :: CAKES : ?

Ans ☒ 1. UXMTE

☒ 2. UXMTF

☒ 3. UYMTE

☒ 4. UXNTE

Question ID : 26433057263

Status : Answered

Chosen Option : 4

Q.21 Six students are sitting around a circular table facing the centre. Chaman is sitting second to the left of Aman. Chaman is sitting second to the right of Tej. Pradeep is sitting second to the left of Kirti. Tej is an immediate neighbour of both Pradeep and Ravi. Who is sitting between Tej and Aman?

Ans ☒ 1. Ravi

☒ 2. Kirti

☒ 3. Chaman

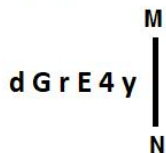
☒ 4. Pradeep

Question ID : 26433055682

Status : Answered

Chosen Option : 1

Q.22 Select the correct mirror image of the given figure when the mirror is placed at MN as shown below.



Ans ☒ 1. Y4E19P

☒ 2. Y4E19P

☒ 3. Y4E19P

☒ 4. Y4E19P

Question ID : 26433056984

Status : Answered

Chosen Option : 2

Q.23 Select the option that is related to the third term in the same way as the second term is related to the first term and the sixth term is related to the fifth term.
24 : 96 :: 32 : ? :: 29 : 116

Ans ☒ 1. 128

☒ 2. 138

☒ 3. 134

☒ 4. 124

Question ID : 26433057061

Status : Answered

Chosen Option : 1

Q.24 Select the option that represents the letters that, when sequentially placed from left to right in the blanks below, will complete the letter series.
A E _ _ U A _ I _ U _ E _ O _ _ _ I _ U

- Ans ☒ 1. IOEOAIUAEO
☒ 2. UIEOUAIEOA
☒ 3. IOEAIUOAE
☒ 4. OUIAEIUOAE

Question ID : 26433056387
Status : Answered
Chosen Option : 1

Q.25 Which letter-cluster will replace the question mark (?) to complete the given series?
FZOI, AFHM, VLAQ, ?

- Ans ☒ 1. QPTU
☒ 2. QRUU
☒ 3. QRTU
☒ 4. QPUU

Question ID : 26433057971
Status : Answered
Chosen Option : 3

Section : Part-D- English Language

Q.1 The following sentence has been split into four segments. Identify the segment that contains a grammatical error.

Joe's favourite / water sports are / sailing, swimming / and to surf.

- Ans ☒ 1. sailing, swimming
☒ 2. water sports are
☒ 3. Joe's favourite
☒ 4. and to surf

Question ID : 26433061496
Status : Not Attempted and Marked For Review
Chosen Option : --

Q.2 Select the INCORRECTLY spelt word.

- Ans ☒ 1. Neuron
☒ 2. Wether
☒ 3. Neither
☒ 4. Enlist

Question ID : 26433066142
Status : Answered
Chosen Option : 2

Q.3 Sentences of a paragraph are given below in jumbled order. Arrange the sentences in the correct order to form a meaningful and coherent paragraph.

- A. Discipline is what continues to keep each individual in regulation.
- B. Students must follow some form of discipline in their lives.
- C. Additionally, each individual has his or her own perspective on discipline.
- D. Discipline can drive a student forward towards a better life and success.

Ans ☒ 1. ACBD

☒ 2. DACB

☒ 3. BDCA

☒ 4. CADB

Question ID : 26433070630

Status : Not Attempted and
Marked For Review

Chosen Option : --

Q.4 Select the option that can be used as a one-word substitute for the given group of words.

Extreme form of patriotism

Ans ☒ 1. Jingoism

☒ 2. Vandalism

☒ 3. Humanism

☒ 4. Nationalism

Question ID : 26433072319

Status : Answered

Chosen Option : 4

Q.5 Select the most appropriate ANTONYM of the highlighted word.
People's dreams perish under pressure.

Ans ☒ 1. drive

☒ 2. disappear

☒ 3. thrive

☒ 4. provoke

Question ID : 26433058298

Status : Not Attempted and
Marked For Review

Chosen Option : --

Q.6 Sentences of a paragraph are given below in jumbled order. Arrange the sentences in the correct order to form a meaningful and coherent paragraph.

- A. Unlike most people, you do not have to make dietary changes or undergo any medication procedures.
- B. Poor diet, lack of physical activity, medication or underlying health conditions can lead to weight gain in an individual.
- C. But if your metabolism is fine, you can lose weight quickly by making minimum efforts.
- D. Weight gain is inevitable if you are not paying attention or not prioritising your health for any reason.

Ans ☒ 1. BDCA

☒ 2. ACBD

☒ 3. ADCB

☒ 4. DBCA

Question ID : 26433058282

Status : Answered

Chosen Option : 4

Q.7 Sentences of a paragraph are given below in jumbled order. Arrange the sentences in the correct order to form a meaningful and coherent paragraph.

- A. The plot of Wuthering Heights focuses on Heathcliff, who is a mysterious person.
B. Then, he returns as rich and educated, and sets about to get his revenge on the two families that he believed ruined his life.
C. Heathcliff was raised in the family who had adopted him, but then he was reduced to the status of a servant there.
D. Further, he ran away from the young woman whom he loved very much and decided to marry another.

Ans ☒ 1. ACDB
☒ 2. ACBD
☒ 3. ABCD
☒ 4. ABDC

Question ID : 26433058357

Status : Not Attempted and Marked For Review

Chosen Option : --

Q.8 The following sentence has been divided into parts. One of them may contain an error. Select the part that contains the error from the given options. If you don't find any error, mark 'No error' as your answer.

The river leisurely flows / through various cities / before it meets the sea.

Ans ☒ 1. before it meets the sea
☒ 2. No error
☒ 3. The river leisurely flows
☒ 4. through various cities

Question ID : 26433061465

Status : Answered

Chosen Option : 1

Q.9 Select the most appropriate homonym to fill in the blank.
She is not keeping ____ these days.

Ans ☒ 1. good
☒ 2. well
☒ 3. notes
☒ 4. better

Question ID : 26433055489

Status : Answered

Chosen Option : 3

Q.10 Select the most appropriate ANTONYM of the word countless from the given sentence :
In my childhood days, during my limited holidays in autumn, I used to see the immeasurable night sky that looked beautiful with countless stars from various positions.

Ans ☒ 1. various
☒ 2. limited
☒ 3. immeasurable
☒ 4. beautiful

Question ID : 26433058545

Status : Answered

Chosen Option : 2

Q.11 Select the most appropriate synonym of the word given in brackets to fill in the blank.

A mother always tries to _____ (protect) her children.

- Ans ☒ 1. guard
☐ 2. serve
☐ 3. shoulder
☐ 4. command

Question ID : 26433058390
Status : Answered
Chosen Option : 1

Q.12 Select the most appropriate meaning of the given idiom.

Bosom Friend

- Ans ☒ 1. Close friend
☐ 2. Enemy
☐ 3. Fake friend
☐ 4. College friend

Question ID : 26433072305
Status : Answered
Chosen Option : 1

Q.13 Select the most appropriate option to fill in the blank.
You may sit _____ you like.

- Ans ☐ 1. whatever
☒ 2. wherever
☐ 3. which
☐ 4. however

Question ID : 26433059693
Status : Answered
Chosen Option : 2

Q.14 Select the most appropriate option to fill in the blank.

I joined the local branch of the NAACP and began to take an active interest in implementing its program in the community itself. By attending most of the monthly meetings I was brought face-to-face with some of the racial problems that plagued the community, especially those involving the courts. Around the time that I started working with the NAACP, the Alabama Council on Human Relations also caught my attention. This interracial group was concerned with human relations in Alabama and employed educational methods to achieve its purpose. It _____ attain, through research and action, equal opportunity for all the people of Alabama.

- Ans ☒ 1. sought to
☐ 2. rested to
☐ 3. found to
☐ 4. abhorred to

Question ID : 26433069766
Status : Answered
Chosen Option : 1

Q.15 Select the most appropriate option to fill in the blank.
Ultimately he _____ his guilt, in the court.

- Ans ☒ 1. confessed
☐ 2. lied
☐ 3. proved
☐ 4. faced

Question ID : 26433059695
Status : Answered
Chosen Option : 1

Q.16 Select the most appropriate synonym of the given word.
Populace

- Ans ☐ 1. Crowd
☐ 2. Popularity
☐ 3. Domination
☒ 4. People

Question ID : 26433059130
Status : Answered
Chosen Option : 1

Q.17 Parts of the given sentence have been given as options. One of them contains a spelling error. Select the option that rectifies the error.

The Bechdel test is a test that uses a set criterion to evaluate a work of fiction based on its inclusion and representation of female characters.

- Ans ☒ 1. representation
☐ 2. inclusion
☐ 3. criterion
☐ 4. character

Question ID : 26433059580
Status : Answered
Chosen Option : 1

Q.18 Select the most appropriate meaning of the underlined word.

The father advised his son, "Don't be a fool who squanders on idle lavishness and laziness".

- Ans ☐ 1. Never talks of his achievements
☐ 2. Utilises any opportunity prudently
☒ 3. Wastes time and money extravagantly
☐ 4. Violates the sanctity of a religious place

Question ID : 26433058630
Status : Answered
Chosen Option : 3

Q.19 Select the most appropriate homophone of the italicised word.

I do not need unnecessary *advice*.

- Ans ☒ 1. Adverse
☒ 2. Advise
☒ 3. Adessive
☒ 4. Advance

Question ID : 26433071900

Status : Answered

Chosen Option : 2

Q.20 Select the most appropriate idiom or phrase to complete the given sentence.

Some of the students often _____ before exams.

- Ans ☒ 1. burn their fingers
☒ 2. are dog tired
☒ 3. burn the midnight oil
☒ 4. talk chalk and cheese

Question ID : 26433056019

Status : Not Attempted and
Marked For Review

Chosen Option : --

Comprehension:

In the following passage, some words have been deleted. Read the passage carefully and select the most appropriate option to fill in each blank.

One of 1. _____ era's greatest scourges is air pollution, on account not only of its impact on climate change 2. _____ its impact on public and individual health due to increasing morbidity and mortality. There are 3. _____ pollutants that are major factors in disease in humans. Among them, Particulate Matter (PM), particles of variable but very small diameter, penetrate the respiratory system via inhalation, causing respiratory and cardiovascular diseases, reproductive and central nervous system dysfunctions, and cancer. 4. _____ the fact that ozone in the stratosphere plays a protective role against ultraviolet irradiation, it is harmful when in high concentration at ground level, also affecting the respiratory and cardiovascular system. Furthermore, nitrogen oxide, sulphur dioxide, Volatile Organic Compounds (VOCs), dioxins, and polycyclic aromatic hydrocarbons are all considered air pollutants that are 5. _____ to humans.

SubQuestion No : 21

Q.21 Select the most appropriate option to fill in blank no. 1.

- Ans ☒ 1. my
☒ 2. our
☒ 3. own
☒ 4. every

Question ID : 26433059016

Status : Answered

Chosen Option : 2

Comprehension:

In the following passage, some words have been deleted. Read the passage carefully and select the most appropriate option to fill in each blank.

One of 1. _____ era's greatest scourges is air pollution, on account not only of its impact on climate change 2. _____ its impact on public and individual health due to increasing morbidity and mortality. There are 3. _____ pollutants that are major factors in disease in humans. Among them, Particulate Matter (PM), particles of variable but very small diameter, penetrate the respiratory system via inhalation, causing respiratory and cardiovascular diseases, reproductive and central nervous system dysfunctions, and cancer. 4. _____ the fact that ozone in the stratosphere plays a protective role against ultraviolet irradiation, it is harmful when in high concentration at ground level, also affecting the respiratory and cardiovascular system. Furthermore, nitrogen oxide, sulphur dioxide, Volatile Organic Compounds (VOCs), dioxins, and polycyclic aromatic hydrocarbons are all considered air pollutants that are 5. _____ to humans.

SubQuestion No : 22

Q.22 Select the most appropriate option to fill in blank no. 2.

Ans ☒ 1. nor

☒ 2. but also

☒ 3. or

☒ 4. either

Question ID : 26433059017

Status : Answered

Chosen Option : 2

Comprehension:

In the following passage, some words have been deleted. Read the passage carefully and select the most appropriate option to fill in each blank.

One of 1. _____ era's greatest scourges is air pollution, on account not only of its impact on climate change 2. _____ its impact on public and individual health due to increasing morbidity and mortality. There are 3. _____ pollutants that are major factors in disease in humans. Among them, Particulate Matter (PM), particles of variable but very small diameter, penetrate the respiratory system via inhalation, causing respiratory and cardiovascular diseases, reproductive and central nervous system dysfunctions, and cancer. 4. _____ the fact that ozone in the stratosphere plays a protective role against ultraviolet irradiation, it is harmful when in high concentration at ground level, also affecting the respiratory and cardiovascular system. Furthermore, nitrogen oxide, sulphur dioxide, Volatile Organic Compounds (VOCs), dioxins, and polycyclic aromatic hydrocarbons are all considered air pollutants that are 5. _____ to humans.

SubQuestion No : 23

Q.23 Select the most appropriate option to fill in blank no. 3.

Ans ☒ 1. very

☒ 2. less

☒ 3. many

☒ 4. more

Question ID : 26433059018

Status : Answered

Chosen Option : 3

Comprehension:

In the following passage, some words have been deleted. Read the passage carefully and select the most appropriate option to fill in each blank.

One of 1. _____ era's greatest scourges is air pollution, on account not only of its impact on climate change 2. _____ its impact on public and individual health due to increasing morbidity and mortality. There are 3. _____ pollutants that are major factors in disease in humans. Among them, Particulate Matter (PM), particles of variable but very small diameter, penetrate the respiratory system via inhalation, causing respiratory and cardiovascular diseases, reproductive and central nervous system dysfunctions, and cancer. 4. _____ the fact that ozone in the stratosphere plays a protective role against ultraviolet irradiation, it is harmful when in high concentration at ground level, also affecting the respiratory and cardiovascular system. Furthermore, nitrogen oxide, sulphur dioxide, Volatile Organic Compounds (VOCs), dioxins, and polycyclic aromatic hydrocarbons are all considered air pollutants that are 5. _____ to humans.

SubQuestion No : 24

Q.24 Select the most appropriate option to fill in blank no. 4.

Ans ☒ 1. Despite

☐ 2. In spite

☐ 3. Disregarding

☐ 4. Doubting

Question ID : 26433059019

Status : Marked For Review

Chosen Option : 1

Comprehension:

In the following passage, some words have been deleted. Read the passage carefully and select the most appropriate option to fill in each blank.

One of 1. _____ era's greatest scourges is air pollution, on account not only of its impact on climate change 2. _____ its impact on public and individual health due to increasing morbidity and mortality. There are 3. _____ pollutants that are major factors in disease in humans. Among them, Particulate Matter (PM), particles of variable but very small diameter, penetrate the respiratory system via inhalation, causing respiratory and cardiovascular diseases, reproductive and central nervous system dysfunctions, and cancer. 4. _____ the fact that ozone in the stratosphere plays a protective role against ultraviolet irradiation, it is harmful when in high concentration at ground level, also affecting the respiratory and cardiovascular system. Furthermore, nitrogen oxide, sulphur dioxide, Volatile Organic Compounds (VOCs), dioxins, and polycyclic aromatic hydrocarbons are all considered air pollutants that are 5. _____ to humans.

SubQuestion No : 25

Q.25 Select the most appropriate option to fill in blank no. 5.

Ans ☐ 1. dangerous

☐ 2. scary

☒ 3. harmful

☐ 4. violent

Question ID : 26433059020

Status : Answered

Chosen Option : 3

Section : Part-E- Computer Fundamentals

Q.1 _____ tab in MS-Excel 2010 ribbon bar provides commands for switching between worksheet views, freezing panes, viewing and arranging multiple windows.

Ans ☐ 1. HOME

☐ 2. REVIEW

☒ 3. VIEW

☐ 4. FORMULA

Question ID : 26433095468

Status : Answered

Chosen Option : 2

Q.2 Hathway is an_____.

- Ans ☒ 1. Internet service provider
- ☐ 2. Search engine
- ☐ 3. Social network site
- ☐ 4. Browser

Question ID : 26433095476

Status : Not Attempted and
Marked For Review

Chosen Option : --

Q.3 In MS-Excel 2010, _____ operation is used to save an already saved file under a different name.

- Ans ☐ 1. SAVE
- ☒ 2. SAVE AS
- ☐ 3. NEW
- ☐ 4. OPEN

Question ID : 26433095421

Status : Answered

Chosen Option : 2

Q.4 _____ shortcut key is used in MS-Excel 2010 to open the review tab.

- Ans ☒ 1. ALT + R
- ☐ 2. ALT + A
- ☐ 3. ALT + I
- ☐ 4. ALT + N

Question ID : 26433095422

Status : Answered

Chosen Option : 1

Q.5 Consider the following statements:

P: Double-click the cell that contains the data that you want to edit.

Q: Click the cell that contains the data that you want to edit, and then press F2.

R: Click the cell that contains the data that you want to edit, and then press Shift Key.

S: Click the cell that contains the data that you want to edit, and then press Ctrl Key.

Which of the following statements are correct about starting to work in edit mode of MS-Excel 2010 worksheet?

- Ans ☐ 1. Only P, Q, R
- ☐ 2. Only P
- ☐ 3. All P, Q, R, S
- ☒ 4. Only P, Q

Question ID : 26433095509

Status : Marked For Review

Chosen Option : 4

Q.6 In paragraph formatting of MS-Word 2010, Ctrl + Q is used for which of the following purpose?

- Ans
- ☒ 1. Open Apply Style task pane
 - ☒ 2. Remove paragraph formatting of highlighted paragraph.
 - ☒ 3. Change the paragraph spacing to double line
 - ☒ 4. Remove paragraph indentation

Question ID : 26433095384

Status : Not Attempted and Marked For Review

Chosen Option : --

Q.7 Which of the following statement is correct about the use of Blind Carbon Copy (BCC) in Gmail?

- Ans
- ☒ 1. It is used for sharing a copy of the email with all the primary recipients.
 - ☒ 2. It is used for sharing a copy of the email with 100 primary recipients.
 - ☒ 3. It is used for sharing a copy of the email with someone without letting the primary recipient know about it.
 - ☒ 4. It is used for sharing a copy of the email with 10 primary recipients.

Question ID : 26433095495

Status : Answered

Chosen Option : 3

Q.8 _____ tab in MS-Excel 2010 ribbon bar allows you to check spelling, track changes, add comments and notes, protect worksheets and workbooks.

- Ans
- ☒ 1. FILE
 - ☒ 2. DATA
 - ☒ 3. REVIEW
 - ☒ 4. FORMULA

Question ID : 26433095418

Status : Answered

Chosen Option : 3

Q.9 _____ function in MS-Excel 2010 capitalizes the first letter in each word of a text value.

- Ans
- ☒ 1. UPPER
 - ☒ 2. LEN
 - ☒ 3. PROPER
 - ☒ 4. LOWER

Question ID : 26433095470

Status : Not Attempted and Marked For Review

Chosen Option : --

Q.10 Flipkart is one of the leading e-commerce marketplaces in India. It belongs to segment:

- Ans
- ☒ 1. Business to Consumer
 - ☒ 2. Business to Government
 - ☒ 3. Government to Business
 - ☒ 4. Government to Consumer

Question ID : 26433095527

Status : Answered

Chosen Option : 1