



# Teachingninja.in



**Latest Govt Job updates**



**Private Job updates**



**Free Mock tests available**



**Visit - [teachingninja.in](https://teachingninja.in)**



# **Delhi Police Head Constable**

**Previous Year Paper  
(Ministerial)  
18 Oct 2022 Shift 2**



## Head Constable Ministerial in Delhi Police Examination 2022

Roll Number	
Candidate Name	
Venue Name	
Exam Date	18/10/2022
Exam Time	1:00 PM - 2:30 PM
Subject	Head Constable Ministerial in Delhi Police Examination 2022

### Section : Part-A-General Awareness

Q.1 Which of the following statements is NOT correct?

- Ans ☒ 1. Cash Reserve Ratio (CRR) = Percentage of deposits which a bank must keep as cash reserves with the bank.
- ☒ 2. Banks are also required to keep some reserves in liquid form in the short term which is called Statutory Liquidity Ratio or SLR.
- ☒ 3. Money Multiplier = 1/Cash Reserve Ratio
- ☒ 4. The RBI cannot influence money supply by changing the rate at which it gives loans to the commercial banks.

Question ID : 26433064497

Status : Answered

Chosen Option : 3

Q.2 Recently in August 2022, Xylitol, a new sugar substitute developed by researchers at IIT Guwahati, has reduced the fermentation time to how many hours as against 48 hours?

- Ans ☒ 1. 11
- ☒ 2. 10
- ☒ 3. 15
- ☒ 4. 12

Question ID : 26433095228

Status : Not Answered

Chosen Option : -

Q.3 The current Legislative Assembly of Goa as of March 2022 is the \_\_\_\_\_ since it received its statehood.

- Ans ☒ 1. seventh
- ☒ 2. ninth
- ☒ 3. eighth
- ☒ 4. sixth

Question ID : 26433061824

Status : Not Answered

Chosen Option : -



Q.4 Who among the following was the founder of the Prarthana Samaj in Bombay?

- Ans
- ☐ 1. Keshab Chandra Sen
  - ☐ 2. Mahadev Govind Ranade
  - ☐ 3. Ishwar Chandra Vidyasagar
  - ☒ 4. Atmaram Panduranga

Question ID : 26433064616  
Status : Not Answered  
Chosen Option : -

Q.5 What was the approximate total budget outlay of the First Five-Year Plan in India?

- Ans
- ☐ 1. ₹1,960 crore
  - ☒ 2. ₹2,069 crore
  - ☐ 3. ₹3,010 crore
  - ☐ 4. ₹2,050 crore

Question ID : 26433059263  
Status : Not Answered  
Chosen Option : -

Q.6 In March 2021, Gram Ujala Yojana was launched with aim at providing high-quality electricity to villages across the country and \_\_\_\_\_ is proposed to sell LED bulbs to the rural population at Rs.10 per piece.

- Ans
- ☐ 1. Atomberg Technologies Pvt Ltd
  - ☒ 2. Energy Efficiency Services Limited (EESL)
  - ☐ 3. EnergyTech Ventures
  - ☐ 4. Smart Joules Pvt Ltd

Question ID : 26433054833  
Status : Not Answered  
Chosen Option : -

Q.7 Which of the following states is irrigated by the Triveni canal?

- Ans
- ☒ 1. Bihar
  - ☐ 2. Chhattisgarh
  - ☐ 3. Rajasthan
  - ☐ 4. West Bengal

Question ID : 26433067174  
Status : Not Answered  
Chosen Option : -

Q.8 The share of adolescents (aged 10-19 years) is found to be about \_\_\_\_, according to the 2011 census.

- Ans
- ☒ 1. 52.7%
  - ☒ 2. 20.9%
  - ☒ 3. 30.5%
  - ☒ 4. 47.3%

Question ID : 26433055336  
Status : Not Answered  
Chosen Option : -

Q.9 For how many weeks is the Amrit Mahotsav of Azadi being organised?

- Ans
- ☒ 1. 75
  - ☒ 2. 52
  - ☒ 3. 72
  - ☒ 4. 65

Question ID : 26433064392  
Status : Answered  
Chosen Option : 2

Q.10 The Kumaon Himalayas are located between:

- Ans
- ☒ 1. Satluj and Jhelum rivers
  - ☒ 2. Satluj and Ravi rivers
  - ☒ 3. Satluj and Kali rivers
  - ☒ 4. Jhelum and Kali rivers

Question ID : 26433071592  
Status : Not Answered  
Chosen Option : -

Q.11 On which date is the annual budget of the central government presented in India?

- Ans
- ☒ 1. First day of March
  - ☒ 2. First day of February
  - ☒ 3. First day of April
  - ☒ 4. Last day of January

Question ID : 26433059089  
Status : Answered  
Chosen Option : 3

Q.12 What is the total increase in population density from the census years 1951 to 2011?

- Ans
- ☒ 1. More than four times
  - ☒ 2. More than three times
  - ☒ 3. More than five times
  - ☒ 4. More than two times

Question ID : 26433054993  
Status : Not Answered  
Chosen Option : -

Q.13 Who among the following Mughal rulers defeated Rana Sanga in the battle of Khanwa?

- Ans
- ☒ 1. Aurangzeb
  - ☒ 2. Babur
  - ☒ 3. Akbar
  - ☒ 4. Humayun

Question ID : 26433055616  
Status : Not Answered  
Chosen Option : -

Q.14 Which of the following state approved its Electric Vehicle (EV) Policy 2022 to make the state an EV-manufacturing hub, announced reimbursement of 100 % SGST and registration fees on sales of electric buses?

- Ans
- ☒ 1. Uttar Pradesh
  - ☒ 2. Chhattisgarh
  - ☒ 3. Madhya Pradesh
  - ☒ 4. Rajasthan

Question ID : 26433095278  
Status : Not Answered  
Chosen Option : -

Q.15 The call 'Dilli Chalo' was given by which of the following leaders?

- Ans
- ☒ 1. Sardar Vallabh Bhai Patel
  - ☒ 2. Mahatma Gandhi
  - ☒ 3. Bal Gangadhar Tilak
  - ☒ 4. Subhash Chandra Bose

Question ID : 26433055644  
Status : Answered  
Chosen Option : 2

Q.16 The Aam Aadmi Party won the Punjab assembly elections in March 2022 with how many seats?

- Ans
- ☒ 1. 96
  - ☒ 2. 90
  - ☒ 3. 94
  - ☒ 4. 92

Question ID : 26433061821  
Status : Not Answered  
Chosen Option : -

Q.17 'Ahirai' is a folk dance of the Bharia tribe of \_\_\_\_\_.

- Ans
- ☒ 1. Uttarakhand
  - ☒ 2. Madhya Pradesh
  - ☒ 3. Karnataka
  - ☒ 4. Nagaland

Question ID : 26433064299  
Status : Not Answered  
Chosen Option : -

Q.18 Which of the following is NOT a Fundamental Duty as per the Constitution of India?

- Ans
- ☒ 1. Duty to respect the National Anthem of India
  - ☒ 2. Duty to pay taxes
  - ☒ 3. Duty to respect the National Flag of India
  - ☒ 4. Duty to protect the sovereignty and integrity of the country

Question ID : 26433080976  
Status : Answered  
Chosen Option : 2

Q.19 As on 7 December 2021, \_\_\_\_\_ Khelo India Centres have been notified in 359 districts of 28 States/UTs.

- Ans
- ☒ 1. 363
  - ☒ 2. 356
  - ☒ 3. 412
  - ☒ 4. 453

Question ID : 26433061813  
Status : Not Answered  
Chosen Option : -

Q.20 Gopuram is a feature of which of the following schools of architecture?

- Ans
- ☐ 1. Nagara
  - ☐ 2. Khajuraho
  - ☒ 3. Dravidian
  - ☐ 4. Odisha

Question ID : 26433064368  
Status : Not Answered  
Chosen Option : -

Section : Part-B-Quantitative Aptitude

Q.1 A can do a piece of work in 18 days, B in 12 days and C in 9 days. A and B did the work for 4 days only. How many days will C take to complete the remaining work?

- Ans
- ☒ 1. 4
  - ☐ 2. 5
  - ☐ 3. 8
  - ☐ 4. 6

Question ID : 26433061083  
Status : Answered  
Chosen Option : 1

Q.2 A manufacturer makes an 18% profit on an item sold to a wholesaler. The wholesaler makes a 20% profit on the sale to the retailer. The shop then sells it to a customer for Rs.15,045, making a 25% profit. The manufacturer's cost price is:

- Ans
- ☒ 1. Rs.8,500
  - ☐ 2. Rs.9,412
  - ☐ 3. Rs.8,900
  - ☐ 4. Rs.9,820

Question ID : 26433057125  
Status : Not Answered  
Chosen Option : -

Q.3 Evaluate the following expression in terms of trigonometric ratios.

$$\frac{\sec A - \tan A}{\sec A + \tan A}$$

- Ans
- ☐ 1.  $1 + 2 \sec^2 A + 2 \sec A \tan A$
  - ☐ 2.  $1 + 2 \sec^2 A - 2 \sec A \tan A$
  - ☒ 3.  $1 + 2 \tan^2 A - 2 \sec A \tan A$
  - ☐ 4.  $1 + 2 \tan^2 A + 2 \sec A \tan A$

Question ID : 26433061935  
Status : Answered  
Chosen Option : 2



Q.4 If  $a = \sqrt{7} + \sqrt{8}$  and  $b = \sqrt{7} - \sqrt{8}$ , then the value of  $3a^2 - 10ab + 3b^2$  is:

- Ans
- ☐ 1. 170
  - ☐ 2. 70
  - ☐ 3. -70
  - ☒ 4. 100

Question ID : 26433066268  
Status : Answered  
Chosen Option : 4

Q.5 What is the average of the following numbers?  
157, 221, 348, 311, 481, 595, 120

- Ans
- ☐ 1. 412
  - ☒ 2. 319
  - ☐ 3. 327
  - ☐ 4. 321

Question ID : 26433064891  
Status : Answered  
Chosen Option : 2

Q.6 Simplify the following.  $\frac{0.75}{10} + \frac{0.31}{100} + \frac{0.09}{1000}$

- Ans
- ☐ 1. 0.03215
  - ☐ 2. 0.08561
  - ☐ 3. 0.05621
  - ☒ 4. 0.07819

Question ID : 26433079831  
Status : Answered  
Chosen Option : 4

Q.7 A man earns ₹44,250 as an interest in 3 years on a certain sum invested with a company at the rate of 10 percent per annum at simple interest. Find the sum invested by the man in the company.

- Ans
- ☐ 1. ₹1,67,500
  - ☐ 2. ₹2,47,500
  - ☐ 3. ₹1,45,500
  - ☒ 4. ₹1,47,500

Question ID : 26433074225  
Status : Answered  
Chosen Option : 4

Q.8 The value of  $\frac{16-0.002}{8+0.4+0.02}$  is:

- Ans
- ☐ 1. 2.1
  - ☐ 2. 1.5
  - ☒ 3. 1.9
  - ☐ 4. 3.2

Question ID : 26433079832  
Status : Answered  
Chosen Option : 3

Q.9 The compound interest (compounded annually) on a sum of money invested for three years yields Rs.800 and Rs.840 in four years. The annual percentage rate of interest is:

- Ans
- ☐ 1. 5.5%
  - ☐ 2. 6%
  - ☒ 3. 5%
  - ☐ 4. 4.5%

Question ID : 26433057134  
Status : Not Answered  
Chosen Option : -

Q.10 If  $3a^2 + \frac{3}{a^2} = 54$ , then the value of  $\frac{a^2+2a-1}{a}$  is:

- Ans
- ☒ 1. 6, -2
  - ☐ 2. -6, 2
  - ☐ 3. 6, 2
  - ☐ 4. -6, -2

Question ID : 26433062682  
Status : Answered  
Chosen Option : 3

Q.11 5 women can complete a work in 16 days. After four days 3 more women joined them. How many days will they now take to complete the remaining work?

- Ans
- ☐ 1.  $7\frac{1}{3}$
  - ☐ 2.  $5\frac{1}{2}$
  - ☒ 3.  $7\frac{1}{2}$
  - ☐ 4.  $8\frac{1}{2}$

Question ID : 26433063727  
Status : Not Answered  
Chosen Option : -

Q.12 In an election, between two candidates Ram and Mohan, Ram secured 40% of the votes and was defeated by a majority of 1200 votes. Find the total number of recorded votes.

- Ans
- ☒ 1. 7,000
  - ☒ 2. 6,000
  - ☒ 3. 5,000
  - ☒ 4. 5,500

Question ID : 26433063458

Status : Answered

Chosen Option : 1

Q.13 The marked price of an article is 25% above its cost price. If it is sold for ₹1,620 furthermore with 12.5% profit, then what is the discount percentage?

- Ans
- ☒ 1. 12%
  - ☒ 2. 8%
  - ☒ 3. 10%
  - ☒ 4. 14%

Question ID : 26433074283

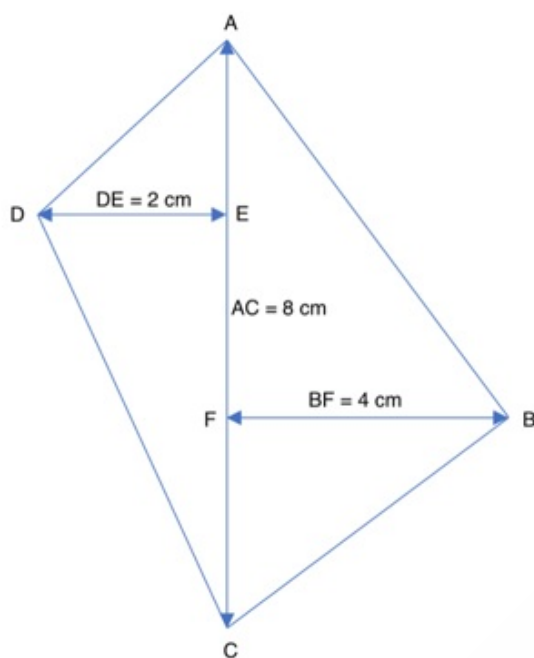
Status : Not Answered

Chosen Option : -



Q.14

Find the area of the given quadrilateral.



- Ans
- ☒ 1.  $22 \text{ cm}^2$
  - ☒ 2.  $24 \text{ cm}^2$
  - ☒ 3.  $26 \text{ cm}^2$
  - ☒ 4.  $20 \text{ cm}^2$

Question ID : 26433061420  
Status : Answered  
Chosen Option : 2

Q.15 If two extreme terms of three continued proportional numbers be  $ab/c$ ,  $ac/b$ , then the mean proportional is:

- Ans
- ☒ 1.  $b$
  - ☒ 2.  $a$
  - ☒ 3.  $ab$
  - ☒ 4.  $ac$

Question ID : 26433058910  
Status : Answered  
Chosen Option : 2

Q.16 Find the maximum length of a pen that can be kept in a cuboid box of dimensions 6 cm × 4 cm × 2 cm.

- Ans
- ☒ 1.  $5\sqrt{14}$  cm
  - ☒ 2.  $3\sqrt{14}$  cm
  - ☒ 3.  $4\sqrt{14}$  cm
  - ☒ 4.  $2\sqrt{14}$  cm

Question ID : 26433058418

Status : Answered

Chosen Option : 4

Q.17 What is the value of the given expression?

$$\frac{198}{6 \text{ of } 3} + \frac{58}{116} + 3(15 - 6 \times 1.25)$$

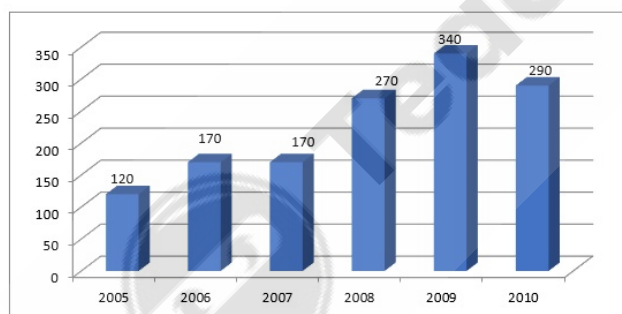
- Ans
- ☒ 1.  $\frac{234}{116}$
  - ☒ 2. 34
  - ☒ 3. 32
  - ☒ 4. 37.5

Question ID : 26433058191

Status : Answered

Chosen Option : 2

Q.18 The graph shows the record of the number of admissions to a certain coaching centre from 2005 to 2010.



In how many years was the number of admissions greater than that of the previous year?

- Ans
- ☒ 1. 3
  - ☒ 2. 4
  - ☒ 3. 1
  - ☒ 4. 2

Question ID : 26433074323

Status : Answered

Chosen Option : 1

Q.19 The perimeter of a sector of a circle of radius 8.2 cm is 22.4 cm. The area of the sector is:

- Ans
- ☒ 1.  $49.2 \text{ cm}^2$
  - ☒ 2.  $24.6 \text{ cm}^2$
  - ☒ 3.  $32.8 \text{ cm}^2$
  - ☒ 4.  $14.2 \text{ cm}^2$

Question ID : 26433062664

Status : Not Answered

Chosen Option : -

Q.20 Two trains A and B are running in opposite directions with different speeds. The speed of train B is 18 km/h more than that of A. Train A crosses a pole in 32 seconds and its length is 210 m less than that of train B. If they cross each other in 34 seconds, the length of train A is \_\_\_\_\_.

- Ans
- ☒ 1. 420 m
  - ☒ 2. 400 m
  - ☒ 3. 380 m
  - ☒ 4. 320 m

Question ID : 26433061316

Status : Not Answered

Chosen Option : -

Section : Part-C-General Intelligence

Q.1 Read the given statements and conclusions carefully. Assuming that the information given in the statements is true, even if it appears to be at variance with commonly known facts, decide which of the given conclusions logically follow(s) from the statements.

Statements:

All carrots are figs.

No fig is tomato.

All potatoes are carrots.

Conclusions:

I. Some tomatoes are carrots.

II. No potato is a tomato.

- Ans
- ☒ 1. Only conclusion II follows
  - ☒ 2. Only conclusion I follows
  - ☒ 3. Either conclusion I or II follows
  - ☒ 4. Neither conclusion I nor II follows

Question ID : 26433079079

Status : Answered

Chosen Option : 1

Q.2 Select the set in which the numbers are related in the same way as are the numbers of the following sets.  
(NOTE: Operations should be performed on the whole numbers, without breaking down the numbers into its constituent digits. E.g. 13 – Operations on 13 such as adding/deleting/multiplying etc. to 13 can be performed. Breaking down 13 into 1 and 3 and then performing mathematical operations on 1 and 3 is not allowed.)  
(54, 137, 116)  
(23, 106, 85)

- Ans ☒ 1. (58, 140, 117)  
☒ 2. (49, 132, 111)  
☒ 3. (38, 111, 90)  
☒ 4. (41, 115, 94)

Question ID : 26433057596  
Status : Answered  
Chosen Option : 2

Q.3 Select the option that represents the letters that, when sequentially placed from left to right in the blanks below, will complete the letter series.  
S \_ C \_ A \_ S O \_ \_ A L \_ O \_ I A \_ \_ O C \_ \_ L

- Ans ☒ 1. IALSOICLILS  
☒ 2. OILSOICLSIA  
☒ 3. OALCISOSLCA  
☒ 4. OILCISCLSLIA

Question ID : 26433056388  
Status : Answered  
Chosen Option : 4

Q.4 Select the numbers from among the given options that can replace the question marks (?) in the following series.  
291, ?, ?, 171, 115, 51

- Ans ☒ 1. 251, 221  
☒ 2. 245, 219  
☒ 3. 259, 219  
☒ 4. 241, 211

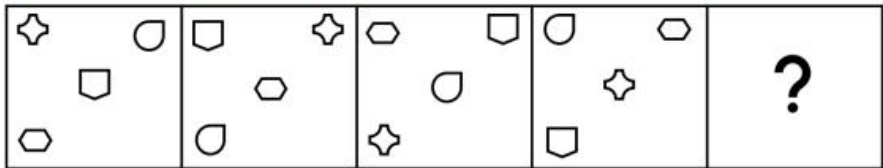
Question ID : 26433057045  
Status : Not Answered  
Chosen Option : -

Q.5 In a code language, 'BOX' is coded as 41 and 'TABLE' is coded as 40. How will 'ALMIRAH' be coded in the same language?

- Ans ☒ 1. 62  
☒ 2. 48  
☒ 3. 56  
☒ 4. 36

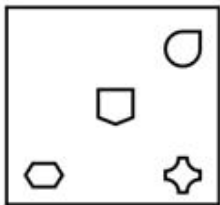
Question ID : 26433078899  
Status : Answered  
Chosen Option : 1

Q.6 Select the figure that will come next in the following figure series.

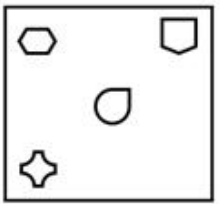


Ans

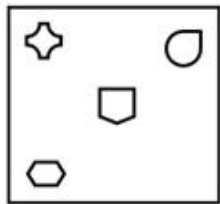
✗ 1.



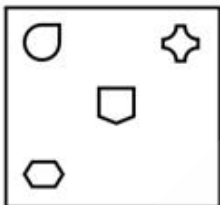
✗ 2.



✓ 3.



✗ 4.



Question ID : 26433076500

Status : Answered

Chosen Option : 3

Q.7 Select the set in which the numbers are related in the same way as are the numbers of the following sets.

(NOTE: Operations should be performed on the whole numbers, without breaking down the numbers into its constituent digits. E.g. 13 – Operations on 13 such as adding/deleting/multiplying etc. to 13 can be performed. Breaking down 13 into 1 and 3 and then performing mathematical operations on 1 and 3 is not allowed.)  
(9, 4, 73)  
(13, 2, 21)

Ans ✗ 1. (10, 5, 115)

✗ 2. (11, 1, 34)

✗ 3. (8, 6, 184)

✓ 4. (17, 3, 44)

Question ID : 26433057607

Status : Answered

Chosen Option : 4



Q.8 Six students are sitting around a circular table facing the centre. Liv is sitting second to the left of Tess. Jake is sitting second to the right of Kate. Tess is an immediate neighbour of both Dew and Kate. Who is sitting between Cole and Liv?

- Ans
- ☒ 1. Tess
  - ☒ 2. Dew
  - ☒ 3. Jake
  - ☒ 4. Kate

Question ID : 26433055684  
Status : Answered  
Chosen Option : 3

Q.9 A, B, C, D, E, F, G and H are sitting around a square table facing the centre of the table. Some of them are sitting at the corners, while some are sitting at the exact centre of the sides. E sits third to the right of B. E sits at one of the corners. G sits second to the left of B. Only one person sits between G and F. Only three people sit between D and H. D is not an immediate neighbour of B. A sits second to the left of H. Who sits to the immediate right of C?

- Ans
- ☒ 1. E
  - ☒ 2. H
  - ☒ 3. B
  - ☒ 4. F

Question ID : 26433058023  
Status : Not Answered  
Chosen Option : -

Q.10 Which two signs and two numbers should be interchanged in the following equation to make it correct?  
 $36 \div 2 + 118 \times 18 - 60 = 647$

- Ans
- ☒ 1. 2 and 60; - and  $\times$
  - ☒ 2. 36 and 18; - and +
  - ☒ 3. 2 and 18;  $\div$  and  $\times$
  - ☒ 4. 118 and 60;  $\times$  and +

Question ID : 26433056462  
Status : Answered  
Chosen Option : 3

Q.11 Which of the following options represents the correct order of the given words as they would appear in the English dictionary?

1. Registry
2. Regatta
3. Regress
4. Regard
5. Regina

- Ans
- ☒ 1. 2,4,5,3,1
  - ☒ 2. 4,5,2,1,3
  - ☒ 3. 4,2,5,1,3
  - ☒ 4. 2,4,1,5,3

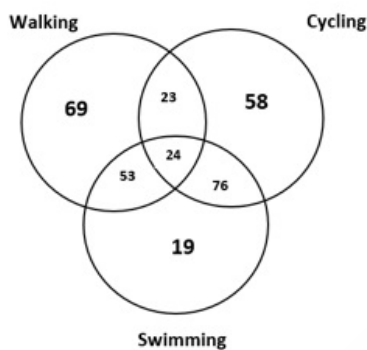
Question ID : 26433068769  
Status : Answered  
Chosen Option : 3

Q.12 Select the option that is related to the fifth letter-cluster in the same way as the second letter-cluster is related to the first letter-cluster and the fourth letter-cluster is related to the third letter-cluster.  
LATEST : NDVHUW :: EATING : GDVLPJ :: CAMPUS : ?

- Ans ☒ 1. EDOSWV  
☒ 2. EDORWV  
☒ 3. EDOSXV  
☒ 4. EDPSWV

Question ID : 26433057258  
Status : Answered  
Chosen Option : 3

Q.13 Study the given diagram carefully and answer the questions. The numbers in different sections indicate the number of people who are engaged in physical activities. How many people CANNOT swim?



- Ans ☒ 1. 172  
☒ 2. 150  
☒ 3. 127  
☒ 4. 81

Question ID : 26433069371  
Status : Not Answered  
Chosen Option : -

Q.14 Which letter cluster will replace the question mark (?) to complete the given series?  
VFPO, ?, PNJW, MRGA, JVDE

- Ans ☒ 1. SJMS  
☒ 2. RKMR  
☒ 3. TKNS  
☒ 4. RJLR

Question ID : 26433057428  
Status : Answered  
Chosen Option : 1

Q.15 Select the option that is related to the fifth letter cluster in the same way as the second letter cluster is related to the first letter cluster and the fourth letter cluster is related to the third letter cluster.  
GLR : WBH :: FMQ : VCG :: KDA : ?

- Ans
- ✓ 1. ATQ
  - ✗ 2. ETU
  - ✗ 3. IJF
  - ✗ 4. KED

Question ID : 26433074682  
Status : Not Answered  
Chosen Option : -

Q.16 In a code language, 'Ram is working hard' is coded as 'pu ma ki ka', 'Niraj is not working' is coded as 'ma ka pa ni', 'not working hard people' is coded as 'si ma ni ki'. What is the code for 'Ram'?

- Ans
- ✗ 1. ka
  - ✗ 2. ki
  - ✗ 3. ma
  - ✓ 4. pu

Question ID : 26433057271  
Status : Answered  
Chosen Option : 4

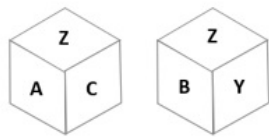
Q.17 Select the correct mirror image of the given figure when the mirror is placed at MN as shown below.



- Ans
- ✓ 1. e a 2 4 1 t Y
  - ✗ 2. e a 2 4 1 t Y
  - ✗ 3. e a 5 4 1 t Y
  - ✗ 4. e a 2 4 1 t Y

Question ID : 26433056975  
Status : Answered  
Chosen Option : 1

Q.18 Six letters X, Y, Z, A, B and C are written on different faces of a dice. Two positions of this dice are shown in the figure. Find the letter on the face opposite to B.



- Ans ☒ 1. A  
☒ 2. C  
☒ 3. X  
☒ 4. Y

Question ID : 26433057797  
Status : Answered  
Chosen Option : 1

Q.19 Select the correct combination of mathematical signs to sequentially replace the \* signs and to balance the given equation.  
 $7 * 7 * 7 * 7 * 7 = 43$

- Ans ☒ 1. -, ÷, +, ×  
☒ 2. +, -, ÷, ×  
☒ 3. ÷, ×, -, +  
☒ 4. ×, +, ÷, -

Question ID : 26433057474  
Status : Answered  
Chosen Option : 4

Q.20 Three letters P, N and T and three symbols &, @ and % are written on different faces of a dice. Two positions of this dice are shown in the figure. Find the letter/symbol on the face opposite to P.



- Ans ☒ 1. @  
☒ 2. &  
☒ 3. T  
☒ 4. %

Question ID : 26433057945  
Status : Answered  
Chosen Option : 2

Q.21 Select the number from among the given options that can replace the question mark (?) in the following series.  
13, 19, 39, 81, 153, ?

- Ans
- ☒ 1. 263
  - ☐ 2. 243
  - ☐ 3. 252
  - ☐ 4. 274

Question ID : 26433057777  
Status : Not Answered  
Chosen Option : -

Q.22 Pointing to a photo of a man, Sita said, "He is the son of the brother of my husband's son." How is the man related to Sita?

- Ans
- ☐ 1. Father
  - ☐ 2. Grandfather
  - ☐ 3. Brother
  - ☒ 4. Grandson

Question ID : 26433057683  
Status : Answered  
Chosen Option : 4

Q.23 A is the brother of C. B is the father of C. D is the wife of A. E is the daughter of D. How is E related to B?

- Ans
- ☐ 1. Sister
  - ☐ 2. Daughter
  - ☒ 3. Son's daughter
  - ☐ 4. Daughter's daughter

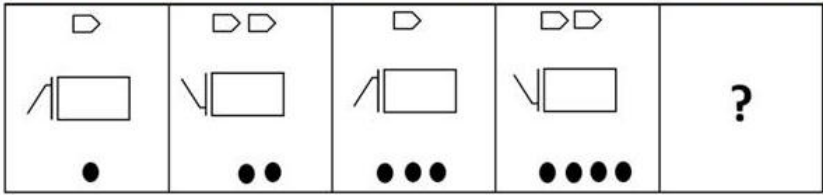
Question ID : 26433057835  
Status : Answered  
Chosen Option : 3

Q.24 Based on the position in the English alphabetical order, three of the following letter-clusters are alike in some manner and one is different. Select the odd letter-cluster.

- Ans
- ☐ 1. EGFH
  - ☒ 2. QTRS
  - ☐ 3. WXYZ
  - ☐ 4. SUTV

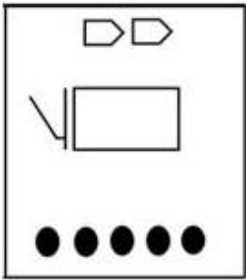
Question ID : 26433095712  
Status : Answered  
Chosen Option : 2

Q.25 Select the figure that will replace the question mark (?) in the following figure series.

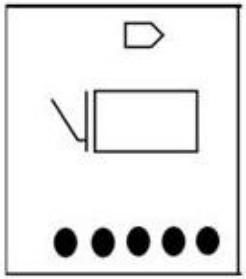


Ans

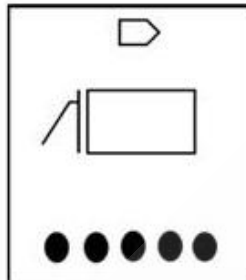
✗ 1.



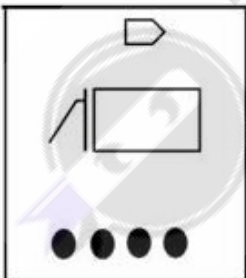
✗ 2.



✓ 3.



✗ 4.



Question ID : 26433056100  
Status : Answered  
Chosen Option : 3

Q.1 Select the option that can be used as a one-word substitute for the given group of words.

Showing a lack of experience, wisdom or judgment

- Ans
- ☒ 1. Childish
  - ☒ 2. Heedless
  - ☒ 3. Naïve
  - ☒ 4. Impractical

Question ID : 26433070671

Status : Answered

Chosen Option : 3

Q.2 Sentences of a paragraph are given below in jumbled order. Arrange the sentences in the correct order to form a meaningful and coherent paragraph.

- A. All meditation techniques are based on yoga asanas (postures) and pranayama (breath control).
- B. Meditation is one of several strategies that may be used to help you live a happier, more positive and less stressful life.
- C. And a healthy lifestyle consists of physical or mental presence but also, spiritual enlightenment.
- D. Yoga asana bridges the gap between the mind and the body, directing people towards a healthy lifestyle.

- Ans
- ☒ 1. BDCA
  - ☒ 2. BDAC
  - ☒ 3. BCAD
  - ☒ 4. BADC

Question ID : 26433058362

Status : Answered

Chosen Option : 4

Q.3 Select the most appropriate ANTONYM of the underlined word in the following sentence.

Travelling by Ola cabs is not much expensive.

- Ans
- ☒ 1. Beneficial
  - ☒ 2. Cheap
  - ☒ 3. Spread
  - ☒ 4. Costly

Question ID : 26433072507

Status : Answered

Chosen Option : 2

Q.4 Select the most appropriate ANTONYM of the underlined word in a sentence.

The company has been forced to sell land to recoup some of the losses.

- Ans
- ☒ 1. Ignore
  - ☒ 2. Lose
  - ☒ 3. Restart
  - ☒ 4. Overlook

Question ID : 26433056007

Status : Answered

Chosen Option : 2

Q.5 Select the INCORRECTLY spelt word.

- Ans
- ☒ 1. Aircraft
  - ☒ 2. Airliner
  - ☒ 3. Aerodynamic
  - ☒ 4. Airdrome

Question ID : 26433055470

Status : Answered

Chosen Option : 4

Q.6 Select the most appropriate option that can substitute the underlined words in the given sentence.

For a moment, it seemed that the storm was certain to happen, irrespective of the speculation that it may not hit California.

- Ans
- ☒ 1. inevitable
  - ☒ 2. predictable
  - ☒ 3. overcome
  - ☒ 4. strong

Question ID : 26433059722

Status : Answered

Chosen Option : 2

Q.7 Select the most appropriate homonym to fill in the blank.

He declared himself a \_\_\_\_\_ saying he can predict anything.

- Ans
- ☒ 1. cere
  - ☒ 2. sear
  - ☒ 3. sere
  - ☒ 4. seer

Question ID : 26433058385

Status : Not Answered

Chosen Option : -

Q.8 Sentences of a paragraph are given below. While the first and the last sentences (S1 and S6) are in the correct order, the sentences in between are jumbled up. Arrange the sentences in the correct order to form a meaningful and coherent paragraph.

S1. Francis Bacon, one of the greatest English essayists, says 'Reading makes a full man—'

A. Now, though reading has not lost its powerful influence, readership has decreased drastically.

B. Novelists, poets and short story writers are not considering writing as a profession.

C. Publishing firms are searching for new ways to make money.

D. All the ancient great leaders were voracious readers.

S6. Self-publishing, which has both negative and positive sides, has become a new trend.

- Ans
- ☒ 1. CDAB
  - ☒ 2. ACDB
  - ☒ 3. BDCA
  - ☒ 4. DABC

Question ID : 26433063633

Status : Answered

Chosen Option : 4



Q.9 Select the most appropriate synonym of the given word.

Rigid

- Ans
- ☐ 1. Bendable
  - ☐ 2. Reliable
  - ☒ 3. Inflexible
  - ☐ 4. Capable

Question ID : 26433058325  
Status : Answered  
Chosen Option : 3

Q.10 Select the most appropriate meaning of the given idiom.

A mare's nest

- Ans
- ☐ 1. With many distinctions
  - ☒ 2. A false invention
  - ☐ 3. Source of irritation
  - ☐ 4. Fair and honest

Question ID : 26433072425  
Status : Not Answered  
Chosen Option : -

Q.11 Select the most appropriate synonym of the given word.  
Incognito

- Ans
- ☒ 1. Anonymous
  - ☐ 2. Popular
  - ☐ 3. Superfluous
  - ☐ 4. Famous

Question ID : 26433059128  
Status : Answered  
Chosen Option : 1

Q.12 Select the most appropriate option to fill in the blank.  
Romeo and Juliet came \_\_\_\_\_ families that hated each other.

- Ans
- ☐ 1. of
  - ☐ 2. into
  - ☒ 3. from
  - ☐ 4. to be

Question ID : 26433060767  
Status : Answered  
Chosen Option : 3

Q.13 Sentences of a paragraph are given below in jumbled order. Arrange the sentences in the correct order to form a meaningful and coherent paragraph.

- A. A new form of Hindustani music known as khayal emerged during the 13<sup>th</sup> and the 14<sup>th</sup> century.
- B.This has led to the existence of family traditions called Gharanas.
- C.The main schools of classical music, Hindustani and Carnatic, continue to thrive through the students and disciples.
- D.This style gave an entirely new dimension to Hindustani classical music.

- Ans
- ☒ 1. ACBD
  - ☒ 2. ACDB
  - ☒ 3. ABCD
  - ☒ 4. CBAD

Question ID : 26433072387  
Status : Answered  
Chosen Option : 3

Q.14 Select the option that can be used as a one-word substitute for the given group of words.  
The act of killing a king

- Ans
- ☒ 1. Regicide
  - ☒ 2. Filicide
  - ☒ 3. Patricide
  - ☒ 4. Homicide

Question ID : 26433060827  
Status : Answered  
Chosen Option : 4

Q.15 Select the most appropriate synonym of the given word.  
Delineate

- Ans
- ☒ 1. Delete
  - ☒ 2. Depict
  - ☒ 3. Demand
  - ☒ 4. Erase

Question ID : 26433063584  
Status : Answered  
Chosen Option : 3

Q.16 Select the INCORRECTLY spelt word.

- Ans
- ☒ 1. Morose
  - ☒ 2. Roast
  - ☒ 3. Sentry
  - ☒ 4. Tomatos

Question ID : 26433066141  
Status : Answered  
Chosen Option : 4

Q.17 The following sentence has been split into four segments. Identify the segment that contains a grammatical error.

With wobbly hands, / his grandmother placed / the terrible shaking cup / on the table.

- Ans
- ☒ 1. the terrible shaking cup
  - ☐ 2. on the table
  - ☐ 3. his grandmother placed
  - ☐ 4. With wobbly hands

Question ID : 26433061468  
Status : Answered  
Chosen Option : 3

Q.18 Select the most appropriate meaning of the given idiom.  
Jump on the bandwagon

- Ans
- ☐ 1. Hurry things up
  - ☐ 2. Not follow the leader
  - ☐ 3. Take a joy ride
  - ☒ 4. Do what everyone else is doing

Question ID : 26433066132  
Status : Answered  
Chosen Option : 1

Q.19 Select the most appropriate option to fill in the blank.  
New York is the most \_\_\_\_\_ city in the United States and the centre of the New York metropolitan area.

- Ans
- ☒ 1. populous
  - ☐ 2. dense
  - ☐ 3. swarming
  - ☐ 4. thronging

Question ID : 26433060769  
Status : Answered  
Chosen Option : 1

Q.20 The following sentence has been divided into parts. One of them may contain an error. Select the part that contains the error from the given options. If you don't find any error, mark 'No error' as your answer.  
The share market / is been suffering losses / due to the pandemic.

- Ans
- ☐ 1. No error
  - ☐ 2. The share market
  - ☒ 3. is been suffering losses
  - ☐ 4. due to the pandemic

Question ID : 26433059060  
Status : Answered  
Chosen Option : 3

**Comprehension:**

In the following passage, some words have been deleted. Read the passage carefully and select the most appropriate option to fill in each blank.

Wilma Rudolph was (1)\_\_\_\_\_ first American woman (2)\_\_\_\_\_three gold medals in Olympics. She was born (3)\_\_\_\_\_ in Tennessee in 1940. The bulk of her childhood was spent in bed. She suffered (4)\_\_\_\_\_ pneumonia and scarlet fever. Soon she became (5)\_\_\_\_\_of the polio virus.

**SubQuestion No : 21**

**Q.21** Select the most appropriate option to fill in blank 1.

- Ans    ☒ 1. a  
         ☒ 2. best  
         ☒ 3. at  
         ☒ 4. the

Question ID : 26433063750  
Status : Answered  
Chosen Option : 4

**Comprehension:**

In the following passage, some words have been deleted. Read the passage carefully and select the most appropriate option to fill in each blank.

Wilma Rudolph was (1)\_\_\_\_\_ first American woman (2)\_\_\_\_\_three gold medals in Olympics. She was born (3)\_\_\_\_\_ in Tennessee in 1940. The bulk of her childhood was spent in bed. She suffered (4)\_\_\_\_\_ pneumonia and scarlet fever. Soon she became (5)\_\_\_\_\_of the polio virus.

**SubQuestion No : 22**

**Q.22** Select the most appropriate option to fill in blank 2.

- Ans    ☒ 1. to win  
         ☒ 2. for wining  
         ☒ 3. by wining  
         ☒ 4. for winning

Question ID : 26433063751  
Status : Answered  
Chosen Option : 1

**Comprehension:**

In the following passage, some words have been deleted. Read the passage carefully and select the most appropriate option to fill in each blank.

Wilma Rudolph was (1)\_\_\_\_\_ first American woman (2)\_\_\_\_\_three gold medals in Olympics. She was born (3)\_\_\_\_\_ in Tennessee in 1940. The bulk of her childhood was spent in bed. She suffered (4)\_\_\_\_\_ pneumonia and scarlet fever. Soon she became (5)\_\_\_\_\_of the polio virus.

**SubQuestion No : 23**

**Q.23** Select the most appropriate option to fill in blank 3.

- Ans
- ☒ 1. preliminary
  - ☒ 2. pre-eminently
  - ☒ 3. prematurely
  - ☒ 4. preaxially

Question ID : 26433063752  
Status : Answered  
Chosen Option : 3

**Comprehension:**

In the following passage, some words have been deleted. Read the passage carefully and select the most appropriate option to fill in each blank.

Wilma Rudolph was (1)\_\_\_\_\_ first American woman (2)\_\_\_\_\_three gold medals in Olympics. She was born (3)\_\_\_\_\_ in Tennessee in 1940. The bulk of her childhood was spent in bed. She suffered (4)\_\_\_\_\_ pneumonia and scarlet fever. Soon she became (5)\_\_\_\_\_of the polio virus.

**SubQuestion No : 24**

**Q.24** Select the most appropriate option to fill in blank 4.

- Ans
- ☒ 1. for
  - ☒ 2. of
  - ☒ 3. from
  - ☒ 4. with

Question ID : 26433063753  
Status : Answered  
Chosen Option : 4

**Comprehension:**

In the following passage, some words have been deleted. Read the passage carefully and select the most appropriate option to fill in each blank.

Wilma Rudolph was (1)\_\_\_\_\_ first American woman (2)\_\_\_\_\_three gold medals in Olympics. She was born (3)\_\_\_\_\_ in Tennessee in 1940. The bulk of her childhood was spent in bed. She suffered (4)\_\_\_\_\_ pneumonia and scarlet fever. Soon she became (5)\_\_\_\_\_of the polio virus.

SubQuestion No : 25

Q.25 Select the most appropriate option to fill in blank 5

- Ans
- ☒ 1. victimiser
  - ☒ 2. victim
  - ☒ 3. victimised
  - ☒ 4. victimisation

Question ID : 26433063754  
Status : Answered  
Chosen Option : 2

Section : Part-E- Computer Fundamentals

Q.1 \_\_\_\_\_ is used when you want a cell reference to stay fixed on specific cell in MS-Excel 2010.

- Ans
- ☒ 1. Automatic cell reference
  - ☒ 2. Absolute cell reference
  - ☒ 3. Mixed cell reference
  - ☒ 4. Specific cell reference

Question ID : 26433095368  
Status : Answered  
Chosen Option : 4

Q.2 Which of the following shortcut key is used to align the text to the left in MS-Word 2010?

- Ans
- ☒ 1. Ctrl+L
  - ☒ 2. Ctrl+Shift+M
  - ☒ 3. Ctrl+M
  - ☒ 4. Ctrl+Shift+L

Question ID : 26433095512  
Status : Answered  
Chosen Option : 4

Q.3 An \_\_\_\_\_ is a folder in an email application that accepts incoming messages.

- Ans
- ☒ 1. Inbox
  - ☒ 2. Outbox
  - ☒ 3. Trash
  - ☒ 4. Draft

Question ID : 26433095445  
Status : Answered  
Chosen Option : 1

Q.4 In MS-Excel 2010 \_\_\_\_\_ is used to represent the data in the form of bars and lines.

Ans ☒ 1. CHART

☐ 2. SORT

☐ 3. FILTER

☐ 4. TABLE

Question ID : 26433095441

Status : Answered

Chosen Option : 1

Q.5 In MS-Excel 2010, rows are identified by:

Ans ☐ 1. \*, &, ^

☐ 2. @, \$, %

☐ 3. A, B, C

☒ 4. 1, 2, 3

Question ID : 26433095413

Status : Answered

Chosen Option : 4

Q.6 How many numbers of rows and columns on a worksheet of MS-Excel 2010?

Ans ☐ 1. 65536 rows by 16,384 columns

☒ 2. 1,048,576 rows by 16,384 columns

☐ 3. 65536 rows by 812 columns

☐ 4. 1,048,576 rows by 65536 columns

Question ID : 26433095519

Status : Answered

Chosen Option : 2

Q.7 Which of the following is not a preconfigured watermark in MS-Word 2010?

Ans ☐ 1. "CONFIDENTIAL" watermark with gray horizontal text.

☐ 2. "CONFIDENTIAL" watermark with gray diagonal text.

☐ 3. "DO NOT COPY" watermark with gray diagonal text.

☒ 4. "DO NOT COPY" watermark with gray vertical text.

Question ID : 26433095524

Status : Answered

Chosen Option : 2

Q.8 A \_\_\_\_\_ is a type of malicious software, or malware, that spreads between computers and causes damage to data and software.

Ans ☐ 1. BLOG

☐ 2. Instant messenger

☒ 3. VIRUS

☐ 4. EMAIL

Question ID : 26433095477

Status : Answered

Chosen Option : 3

Q.9 \_\_\_\_\_ function in MS-Excel 2010 counts how many values are in the list of arguments.

- Ans
- ☒ 1. CEILING
  - ☒ 2. COUNTA
  - ☒ 3. IF
  - ☒ 4. COUNTIF

Question ID : 26433095450  
Status : Answered  
Chosen Option : 4

Q.10 \_\_\_\_\_ command in a web browser helps to move to the next page from the current page.

- Ans
- ☒ 1. Forward
  - ☒ 2. Back
  - ☒ 3. Create
  - ☒ 4. Save

Question ID : 26433095426  
Status : Answered  
Chosen Option : 1

