



Teachingninja.in



Latest Govt Job updates



Private Job updates



Free Mock tests available

Visit - teachingninja.in



Delhi Police Head Constable

**Previous Year Paper
(Ministerial) 19 Oct 2022
Shift 3**



Head Constable Ministerial in Delhi Police Examination 2022

Roll Number	
Candidate Name	
Venue Name	
Exam Date	19/10/2022
Exam Time	5:00 PM - 6:30 PM
Subject	Head Constable Ministerial in Delhi Police Examination 2022

Section : Part-A-General Awareness

Q.1 Which of the following is NOT considered as a revenue receipt of the Government of India?

- Ans
- ☒ 1. Fines
 - ☒ 2. Fees
 - ☒ 3. Government borrowings
 - ☒ 4. Income from PSUs

Question ID : 26433059090
Status : Answered
Chosen Option : 3

Q.2 Which Article of the Constitution of India bestows the Right to Equality and guarantees that the State will prohibit discrimination on any ground of caste, sex, religion, race or place of birth?

- Ans
- ☒ 1. Article 18
 - ☒ 2. Article 16
 - ☒ 3. Article 15
 - ☒ 4. Article 17

Question ID : 26433069846
Status : Not Answered
Chosen Option : --

Q.3 Loktak Hydro Electric Power plant is located in which of the following states in India?

- Ans
- ☒ 1. Manipur
 - ☒ 2. Maharashtra
 - ☒ 3. Meghalaya
 - ☒ 4. Sikkim

Question ID : 26433095249
Status : Not Answered
Chosen Option : --

Q.4 The first population census in India was conducted in the year ____.

- Ans
- ☐ 1. 1880
 - ☒ 2. 1872
 - ☐ 3. 1881
 - ☐ 4. 1885

Question ID : 26433055329
Status : Answered
Chosen Option : 3

Q.5 Saroja Vaidyanathan was conferred the Padma Shri Award in 2002 and the Padma Bhushan Award in 2013 by the Government of India for her significant contributions to the dance form:

- Ans
- ☐ 1. Manipuri
 - ☒ 2. Bharatnatyam
 - ☐ 3. Kathak
 - ☐ 4. Odissi

Question ID : 26433064642
Status : Answered
Chosen Option : 3

Q.6 What was the composition of India's foreign trade at the time of her independence?

- Ans
- ☒ 1. Exports consisted largely of raw material and imports comprised largely of finished goods
 - ☐ 2. Imports consisted largely of raw material and exports comprised largely of finished goods
 - ☐ 3. Imports included raw material only
 - ☐ 4. Export included finished goods only

Question ID : 26433059111
Status : Answered
Chosen Option : 1

Q.7 The Third Battle of Panipat was fought in 1761 between the Marathas and who among the following Afghan rulers?

- Ans
- ☐ 1. Nadir Shah
 - ☒ 2. Ahmad Shah Abdali
 - ☐ 3. Zaman Shah
 - ☐ 4. Humayun Mirza

Question ID : 26433065550
Status : Not Answered
Chosen Option : --

Q.8 Expand 'NICDIT':

- Ans
- ☒ 1. National Industrial Complex Development and Implementation Technology
 - ☒ 2. National Institute of Corporate Development and Implementation Trust
 - ☒ 3. National Industrial Corridor Development and Implementation Trust
 - ☒ 4. National Information and Communication Development and Implementation Technology

Question ID : 26433066585

Status : Not Answered

Chosen Option : --

Q.9 Which of the following is NOT a lagoon lake in India?

- Ans
- ☒ 1. Pulicat lake
 - ☒ 2. Chilika lake
 - ☒ 3. Dal lake
 - ☒ 4. Vembanad lake

Question ID : 26433055319

Status : Not Answered

Chosen Option : --

Q.10 Under the 'Padhna Likhna Abhiyan' introduced in 2020-21, the basic literacy assessment will be done thrice a year by which agency?

- Ans
- ☒ 1. NIOS
 - ☒ 2. Nearest Corporation school
 - ☒ 3. Nearest Kendriya Vidyalaya
 - ☒ 4. CBSE

Question ID : 26433055571

Status : Not Answered

Chosen Option : --

Q.11 In April 2021, who has been appointed as the new Mission Director for the Atal Innovation Mission (AIM), a flagship initiative of the Government of India under the auspices of NITI Aayog?

- Ans
- ☒ 1. Chetan Vaidya
 - ☒ 2. Anantha Nageswaran
 - ☒ 3. Chintan Vaishnav
 - ☒ 4. Ajay Seth

Question ID : 26433055566

Status : Not Answered

Chosen Option : --

Q.12 In the context of microfinance in India, which of the following statements is NOT correct?

- Ans ☒ 1. Microfinance, also called microcredit, is the provision of small credit to the low-income individuals or groups who otherwise would have no other access to financial services.
- ☒ 2. Microfinance providing 'micro' credit with no collateral whatsoever to the low-income individuals or groups of our society.
- ☒ 3. Microfinance providing 'micro' credit with collateral whatsoever to the low-income individuals or groups of our society.
- ☒ 4. The term 'missing middle' is often used to the low-income individuals or groups of our society who lose out on formal credit for want of a collateral support.

Question ID : 26433064488
Status : Not Answered
Chosen Option : --

Q.13 What has been India's rank in the medal tally at the ISSF World Cup 2022 in Cairo, organised by the International Shooting Sport Federation?

- Ans ☒ 1. Second
- ☒ 2. Fourth
- ☒ 3. Third
- ☒ 4. First

Question ID : 26433054835
Status : Not Answered
Chosen Option : --

Q.14 Which of the following festivals belongs to the state of Assam?

- Ans ☒ 1. Pongal
- ☒ 2. Bihu
- ☒ 3. Dree
- ☒ 4. Losar

Question ID : 26433064394
Status : Answered
Chosen Option : 2

Q.15 Recently in August 2022, Ashok Leyland had developed India's first AC electric double - decker bus. What is the name of the bus?

- Ans ☒ 1. Switch EiV 22
- ☒ 2. Switch EV
- ☒ 3. Switch 2022
- ☒ 4. AC Switch

Question ID : 26433095229
Status : Answered
Chosen Option : 1

Q.16 In March 2022 State election of Manipur, incumbent Chief Minister _____ won from Heingang seat.

- Ans
- ☒ 1. Thongam Biswajit Singh
 - ☒ 2. Letpao Haokip
 - ☒ 3. Yumnam Joykumar Singh
 - ☒ 4. Nongthombam Biren Singh

Question ID : 26433054834
Status : Not Answered
Chosen Option : --

Q.17 Who among the following was the Governor General when the practice of Sati was banned through a law in British India?

- Ans
- ☒ 1. Charles Metcalf
 - ☒ 2. William Bentinck
 - ☒ 3. William Butterworth Bayley
 - ☒ 4. Henry Hardinge

Question ID : 26433065539
Status : Not Answered
Chosen Option : --

Q.18 Which of the following states recorded the lowest population density in the 2011 census?

- Ans
- ☒ 1. Manipur
 - ☒ 2. Arunachal Pradesh
 - ☒ 3. Nagaland
 - ☒ 4. Tripura

Question ID : 26433055337
Status : Answered
Chosen Option : 2

Q.19 Which famous temple also known as 'The Big Temple' has been built by Rajaraja Chola I?

- Ans
- ☒ 1. Brihadisvarar Temple at Thanjavur
 - ☒ 2. Airavatesvara Temple at Darasuram
 - ☒ 3. Nageswaraswamy Temple at Kumbakonam
 - ☒ 4. Sri Venkateswara Swami Vaari Temple at Tirupati

Question ID : 26433095234
Status : Not Answered
Chosen Option : --

Q.20 The Barabati Fort built by the Ganga dynasty is situated in the Indian state of _____.

- Ans
- ☒ 1. Madhya Pradesh
 - ☒ 2. Telangana
 - ☒ 3. Odisha
 - ☒ 4. Karnataka

Question ID : 26433064363
Status : Not Answered
Chosen Option : --

Section : Part-B-Quantitative Aptitude

Q.1 If $a \cos \theta + b \sin \theta = y$, then find the value of $b \cos \theta - a \sin \theta$.

- Ans
- ☒ 1. $a^2 + b^2 - y^2$
 - ☒ 2. $\sqrt{a^2 + b^2 - y^2}$
 - ☒ 3. $\sqrt{a^2 - b^2 + y^2}$
 - ☒ 4. $\sqrt{a^2 - b^2 - y^2}$

Question ID : 26433058945
Status : Not Answered
Chosen Option : --

Q.2 A person borrowed some money on compound interest and returned it in 3 equal annual instalments. If the rate of interest is 15% per annum and the annual instalment is ₹12,167, then find the sum borrowed.

- Ans
- ☒ 1. ₹27,780
 - ☒ 2. ₹25,780
 - ☒ 3. ₹26,970
 - ☒ 4. ₹28,530

Question ID : 26433058970
Status : Not Attempted and Marked For Review
Chosen Option : --

Q.3 If a person's weight decreases from 160 pounds to 152 pounds, what is the percentage decrease in the person's weight?

- Ans
- ☒ 1. 7%
 - ☒ 2. 5%
 - ☒ 3. 4%
 - ☒ 4. 6%

Question ID : 26433056871
Status : Answered
Chosen Option : 2

Q.4 A tradesman marks his goods at 40% above the cost price. He allows his customers a discount of 16% on the marked price. The profit percentage is:

- Ans ☒ 1. 17.6%
☒ 2. 16.6%
☒ 3. 15.6%
☒ 4. 17.1%

Question ID : 26433064019
Status : Answered
Chosen Option : 1

Q.5 The ratio of two integers is 3 : 5 such that their sum is 64. Find the largest integer.

- Ans ☒ 1. 40
☒ 2. 44
☒ 3. 24
☒ 4. 48

Question ID : 26433058409
Status : Answered
Chosen Option : 1

Q.6 The value of $\frac{a^2-(b-c)^2}{(a+c)^2-b^2} + \frac{b^2-(a-c)^2}{(a+b)^2-c^2} + \frac{c^2-(a-b)^2}{(b+c)^2-a^2}$ is:

- Ans ☒ 1. 1
☒ 2. 3
☒ 3. 0
☒ 4. 2

Question ID : 26433061116
Status : Not Answered
Chosen Option : --

Q.7 A dishonest tradesman sells rice at Rs.40 per kg, which he has bought at Rs.30 per kg, and he gives 600 gm to the customer instead of 1 kg. Find his overall profit percentage.

- Ans ☒ 1. 122.22%
☒ 2. 73.33%
☒ 3. 105.55%
☒ 4. 94.44%

Question ID : 26433058405
Status : Not Attempted and Marked For Review
Chosen Option : --

Q.8 What is the volume of a hemisphere having a diameter of 4.2 cm?
(Take $\pi = 22/7$)

- Ans
- ✓ 1. 19.404 cm^3
 - ✗ 2. 39.60 cm^3
 - ✗ 3. 18.804 cm^3
 - ✗ 4. 19.960 cm^3

Question ID : 26433058807
Status : Answered
Chosen Option : 2

Q.9 Simplify.

$$21 + 7 - 3(8 + 91) - \frac{98}{2} + \frac{(21 + 9 \times 3 - 6)}{21}$$

- Ans
- ✓ 1. (-316)
 - ✗ 2. (216)
 - ✗ 3. (-216)
 - ✗ 4. (316)

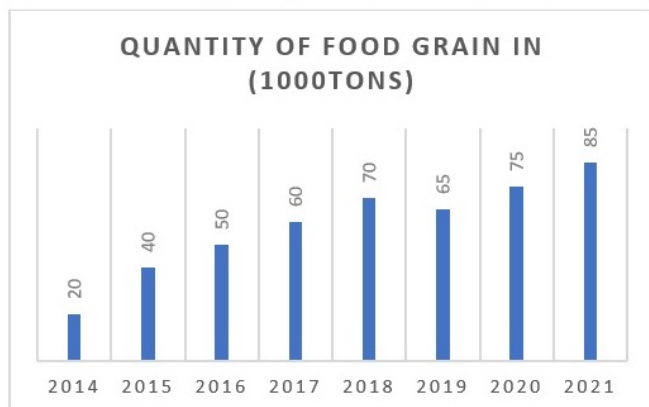
Question ID : 26433056293
Status : Answered
Chosen Option : 1

Q.10 Express the number $6.19\bar{5}$ as a vulgar fraction.

- Ans
- ✓ 1. $6\frac{44}{225}$
 - ✗ 2. $6\frac{40}{225}$
 - ✗ 3. $6\frac{44}{221}$
 - ✗ 4. $6\frac{14}{221}$

Question ID : 26433063675
Status : Not Answered
Chosen Option : --

- Q.11 Study the following graph carefully and answer the question given.
Production of food grains by a state over the years. (1000 tons)



What was the difference in the production of the food grains between 2015 and 2018?

- Ans
- ☒ 1. 10,000 tons
 - ☒ 2. 40,000 tons
 - ☒ 3. 20,000 tons
 - ☒ 4. 30,000 tons

Question ID : 26433074234

Status : Answered

Chosen Option : 4

- Q.12 15 men take 6 days to complete a job working 5 hours a day. How many hours a day should 18 men take to complete the job in 6 days?

- Ans
- ☒ 1. $3\frac{1}{6}$
 - ☒ 2. $1\frac{1}{6}$
 - ☒ 3. $2\frac{1}{6}$
 - ☒ 4. $4\frac{1}{6}$

Question ID : 26433063428

Status : Answered

Chosen Option : 4

- Q.13 Eight solid metallic spheres of radius 5 cm are melted and recast into another solid sphere. What is 35% of its diameter (in cm)? (Take $\pi = \frac{22}{7}$)

- Ans
- ☒ 1. 8
 - ☒ 2. 7
 - ☒ 3. 10
 - ☒ 4. 12

Question ID : 26433063259

Status : Not Attempted and Marked For Review

Chosen Option : --

Q.14 A man goes to a certain place at a speed of 60km/h and returns to the original place at a speed of 40 km/h. Find the average speed for the up and down journey.

- Ans
- ☒ 1. 43 km/h
 - ☒ 2. 42 km/h
 - ☒ 3. 40 km/h
 - ☒ 4. 48 km/h

Question ID : 26433063850

Status : Answered

Chosen Option : 4

Q.15 ΔPQR is right-angled at Q such that QR = 16 cm and PQ = 12 cm. A circle with centre O has been inscribed in triangle touching to all three sides of triangle such that $OA \perp PQ$ and $OB \perp QR$ and $OC \perp PR$. If $OA = OB = OC = r$, then find r.

- Ans
- ☒ 1. 12 cm
 - ☒ 2. 8 cm
 - ☒ 3. 4 cm
 - ☒ 4. 16 cm

Question ID : 26433061433

Status : Not Attempted and Marked For Review

Chosen Option : --

Q.16 The value of $0.\overline{45} \times 1.\overline{22}$ is:

- Ans
- ☒ 1. $0.\overline{5}$
 - ☒ 2. $0.\overline{4}$
 - ☒ 3. $0.\overline{6}$
 - ☒ 4. $0.\overline{3}$

Question ID : 26433079834

Status : Answered

Chosen Option : 1

Q.17 What sum of money will produce ₹525 interest in $5\frac{1}{2}$ years at $2\frac{1}{2}\%$ simple interest?

- Ans
- ☒ 1. ₹3,185.5
 - ☒ 2. ₹3,188.18
 - ☒ 3. ₹3,818.18
 - ☒ 4. ₹3,210

Question ID : 26433065089

Status : Not Attempted and Marked For Review

Chosen Option : --

Q.18 Alok can complete a task in 6 days. Bijay can complete the same task in 8 days. Alok and Bijay agreed to do it for Rs.3,200. With the help of Chintu, they finished the job in 3 days. What is the amount to be paid to Chintu?

- Ans
- 1. Rs.580
 - 2. Rs.520
 - 3. Rs.450
 - 4. Rs.400

Question ID : 26433057143
Status : Answered
Chosen Option : 4

Q.19 A person rows a boat 11 km in 5 hours downstream and returns upstream in 7 hours. What is the speed of the stream in km/h?

- Ans
- 1. $\frac{11}{27}$ km/h
 - 2. $\frac{11}{28}$ km/h
 - 3. $\frac{11}{35}$ km/h
 - 4. $\frac{11}{38}$ km/h

Question ID : 26433061082
Status : Answered
Chosen Option : 3

Q.20 The value of $m[\sin \theta + 2\cos^2 \theta + 3 \sin \theta + 4\cos^2 \theta + \dots + 18\cos^2 \theta]$ is a perfect square of an integer, $\theta = 30^\circ$, $\theta = 45^\circ$ and $150 \leq m \leq 180$. Find the value of m.

- Ans
- 1. 176
 - 2. 168
 - 3. 152
 - 4. 161

Question ID : 26433056357
Status : Not Answered
Chosen Option : --

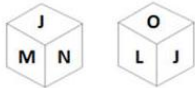
Section : Part-C-General Intelligence

Q.1 Which of the following numbers will replace the question mark (?) in the given series?
533, 474, ?, 374, 331, 290

- Ans
- 1. 441
 - 2. 361
 - 3. 421
 - 4. 425

Question ID : 26433056475
Status : Not Attempted and Marked For Review
Chosen Option : --

Q.2 Six letters J, K, L, M, N and O are written on different faces of a dice. Two positions of this dice are shown in the figure. Find the letter on the face opposite to L.



- Ans
- ☒ 1. O
 - ☒ 2. N
 - ☒ 3. K
 - ☒ 4. M

Question ID : 26433057944
Status : Answered
Chosen Option : 2

Q.3 Select the combination of letters that when sequentially placed in the blanks of the given series, will complete the series.
ACEA _ CEAAC _ EA _ C _ EEA

- Ans
- ☒ 1. ACAE
 - ☒ 2. ACAC
 - ☒ 3. CACE
 - ☒ 4. CCAA

Question ID : 26433057740
Status : Answered
Chosen Option : 2

Q.4 Six students are sitting around a circular table facing the centre. Milo is an immediate neighbour of both Peter and Oscar. Nolan is sitting second to the right of Peter. Lucy is sitting third to the left of Oscar. Kylie is an immediate neighbour of both Oscar and Nolan. Who is sitting between Peter and Nolan?

- Ans
- ☒ 1. Kylie
 - ☒ 2. Oscar
 - ☒ 3. Milo
 - ☒ 4. Lucy

Question ID : 26433076514
Status : Answered
Chosen Option : 4

Q.5 'Beautiful' is related to 'Gorgeous' in the same way as 'Big' is related to '_____'.
(The words must be considered as meaningful English words and must NOT be related to each other based on the number of letters/number of consonants/vowels in the word)

- Ans
- ☒ 1. Hard
 - ☒ 2. Short
 - ☒ 3. Minor
 - ☒ 4. Huge

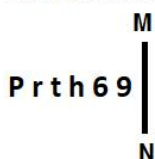
Question ID : 26433078885
Status : Answered
Chosen Option : 4

Q.6 In a code language, 'COAST' is coded as S48D and 'GIANT' is coded as S41H. How will 'TREND' be coded in the same language?

- Ans
- ☒ 1. S51C
 - ☒ 2. S49C
 - ☒ 3. C51U
 - ☒ 4. C49U

Question ID : 26433057830
Status : Answered
Chosen Option : 4

Q.7 Select the correct mirror image of the given figure when the mirror is placed at MN as shown below.



- Ans
- ☒ 1. e64t1q
 - ☒ 2. eəht1q
 - ☒ 3. 6e4t1d
 - ☒ 4. e6ht1q

Question ID : 26433056981
Status : Answered
Chosen Option : 2

Q.8 Which two signs should be interchanged to make the given equation correct?
 $184 \times 8 + 24 \div 4 - 72 = 47$

- Ans
- ☒ 1. \div and $-$
 - ☒ 2. \times and \div
 - ☒ 3. $+$ and \times
 - ☒ 4. $+$ and $-$

Question ID : 26433056860
Status : Answered
Chosen Option : 2

Q.9 Which of the following options represents the correct order of the given words as they would appear in the English dictionary?

1. Kinetic
2. Kilt
3. Kindle
4. Kimono
5. Kiln

Ans ☒ 1. 2,5,3,4,1
☒ 2. 2,5,4,1,3
☒ 3. 5,2,4,3,1
☒ 4. 5,4,2,1,3

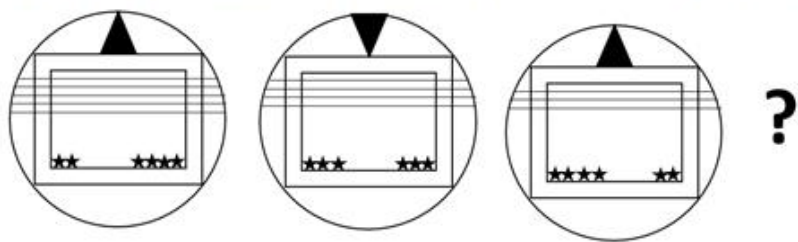
Question ID : 26433068771

Status : Answered

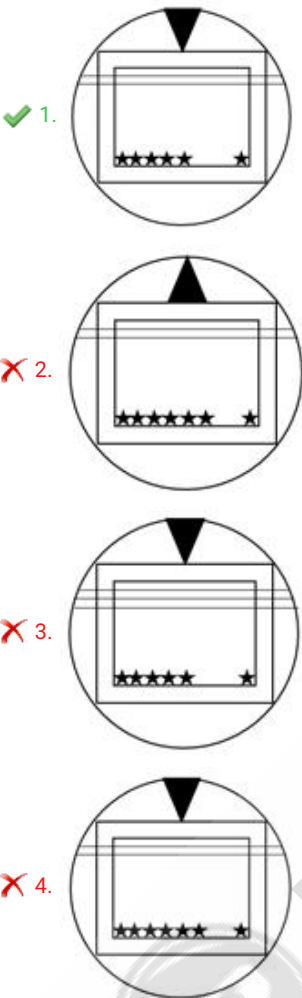
Chosen Option : 3



Q.10 Select the figure that will come next in the following figure series.



Ans



Question ID : 26433057528
Status : Answered
Chosen Option : 1

Q.11 Select the option that is related to the fourth number in the same way as the first number is related to the second number and the fifth number is related to the sixth number.
441: 23 :: ? : 31 :: 289:19

- Ans
- ✓ 1. 841
 - ✗ 2. 900
 - ✗ 3. 784
 - ✗ 4. 961

Question ID : 26433056490
Status : Not Attempted and Marked For Review
Chosen Option : --

Q.12 'P & Q' means 'P is the sister of Q'.
'P % Q' means 'P is the brother of Q'.
'P \$ Q' means 'P is the mother of Q'.
'P = Q' means 'P is the father of Q'.

If $A = B \$ C \& D \% E$, then how is C related to A?

- Ans
- ☐ 1. Son's daughter
 - ☒ 2. Daughter's daughter
 - ☐ 3. Son's son
 - ☐ 4. Daughter's son

Question ID : 26433056420
Status : Answered
Chosen Option : 2

Q.13 Which letter-cluster will replace the question mark (?) to complete the given series?
OSRE, PVMC, QYHA, RBCY, ?

- Ans
- ☐ 1. SFYW
 - ☒ 2. SEXW
 - ☐ 3. SFXW
 - ☐ 4. SEYW

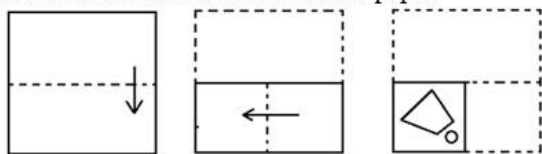
Question ID : 26433057966
Status : Answered
Chosen Option : 2

Q.14 Select the option that is related to the third word in the same way as the second word is related to the first word. (The words must be considered as meaningful English words and must not be related to each other based on the number of letters / number of consonants / vowels in the word.)
Selenography : Moons :: Concology : ?

- Ans
- ☐ 1. Eggs
 - ☒ 2. Shells
 - ☐ 3. Secretions
 - ☐ 4. Soil

Question ID : 26433056591
Status : Not Answered
Chosen Option : --

Q.15 The sequence of folding a piece of paper and the manner in which the folded paper has been cut is shown below. Choose the figure that would most closely resemble the unfolded form of the paper.



Ans

- ✓ 1.
- ✗ 2.
- ✗ 3.
- ✗ 4.

Question ID : 26433067442

Status : Answered

Chosen Option : 1

Q.16 Select the option that is related to the fourth number in the same way as the first number is related to the second number and the fifth number is related to the sixth number.
 $1360 : 111 :: ? : 27 :: 216 : 45$

- ✓ 1. 72
- ✗ 2. 91
- ✗ 3. 84
- ✗ 4. 112

Question ID : 26433056486

Status : Not Attempted and
Marked For Review

Chosen Option : --

Q.17 Select the number from among the given options that can replace the question mark (?) in the following series.
54, 27, 30, 15, 18, 9, ?

- Ans
- ☒ 1. 10
 - ☒ 2. 12
 - ☒ 3. 15
 - ☒ 4. 11

Question ID : 26433067509
Status : Answered
Chosen Option : 2

Q.18 J, K, M, P, S, T, Y and Z are sitting around a square table facing the centre of the table. Some of them are sitting at the corners, while some are sitting at the exact centre of the sides. Z sits to the immediate right of J. Only three people sit between Z and K. M is neither an immediate neighbour of K nor Z. P sits third to the left of M. P sits at a corner of the table. Y sits to the immediate right of T. Who sits third to the right of S?

- Ans
- ☒ 1. T
 - ☒ 2. J
 - ☒ 3. Y
 - ☒ 4. Z

Question ID : 26433058034
Status : Answered
Chosen Option : 4

Q.19 Select the correct combination of mathematical signs to sequentially replace the * signs and to balance the given equation.
 $788 * 197 * 369 * 9 * 143 * 40 = 801 * 3$

- Ans
- ☒ 1. $\div, -, \times, +, \times, \times$
 - ☒ 2. $+, \times, -, +, \times, \div$
 - ☒ 3. $\times, +, -, \div, \div, \times$
 - ☒ 4. $-, +, -, +, \div, \times$


Question ID : 26433056531
Status : Not Attempted and Marked For Review
Chosen Option : --

Q.20 Select the figure that will replace the question mark (?) in the following figure series.




Ans


✗ 1.




✗ 2.



✓ 3.



✗ 4.



Question ID : 26433055723

Status : Answered

Chosen Option : 3

Q.21 In this question, three statements are given, followed by two conclusions numbered I and II.

Assuming the statements to be true, even if they seem to be at variance with commonly known facts, decide which of the conclusion(s) logically follow(s) from the statements.

Statements:

Some flowers are pink.

All pink things are beautiful.

Some beautiful things are costly.

Conclusions:

I. All flowers are beautiful.

II. Some pink things are costly.

Ans

✓ 1. Neither conclusion I nor II follows.

✗ 2. Both conclusions I and II follow.

✗ 3. Only conclusion I follows.

✗ 4. Only conclusion II follows.

Question ID : 26433057917

Status : Answered

Chosen Option : 1

Q.22 Three of the following four letter-clusters are alike in a certain way and one is different.
Pick the odd one out.

- Ans ☒ 1. LKJA
☒ 2. RQPE
☒ 3. ABCV
☒ 4. ZYXI

Question ID : 26433056025

Status : Answered

Chosen Option : 3

Q.23 A * B means 'A is the father of B'.
A + B means 'A is the son of B'.
A - B means 'A is the brother of B'.
A & B means 'A is the sister of B'.

If W * Q & R - S + T, then how is W related to T?

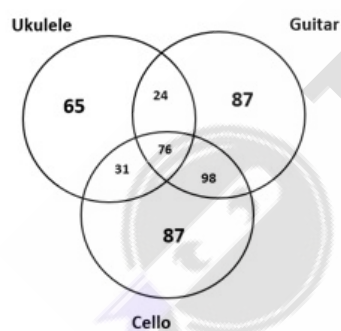
- Ans ☒ 1. Father's brother
☒ 2. Husband
☒ 3. Brother
☒ 4. Father's father

Question ID : 26433067507

Status : Answered

Chosen Option : 2

Q.24 Study the given diagram carefully and answer the questions. The numbers in different sections indicate the number of people with musical skills. How many people can play cello?



- Ans ☒ 1. 174
☒ 2. 205
☒ 3. 292
☒ 4. 87

Question ID : 26433069374

Status : Answered

Chosen Option : 3

Q.25 In a certain code language, 'COOK' is written as '88' and 'FISH' is written as '84'. How will 'RICE' be written in that language?

- Ans
- ☒ 1. 72
 - ☒ 2. 35
 - ☒ 3. 70
 - ☒ 4. 68

Question ID : 26433057282
Status : Answered
Chosen Option : 1

Section : Part-D- English Language

Q.1 Select the most appropriate synonym of the given word.
Dilettante

- Ans
- ☒ 1. Maestro
 - ☒ 2. Addict
 - ☒ 3. Actor
 - ☒ 4. Amateur

Question ID : 26433059133
Status : Not Answered
Chosen Option : --

Q.2 Select the most appropriate option that can substitute the underlined segment in the given sentence.
After the scorching heat of summer, people welcome rain, a season when clouds cover a large part of the sky.

- Ans
- ☒ 1. the sky looks cloudy
 - ☒ 2. the sky remains clouded
 - ☒ 3. the sky remains overcast
 - ☒ 4. the sky is filled with clouds

Question ID : 26433058536
Status : Answered
Chosen Option : 4

Q.3 Select the idiom that can substitute the underlined group of words.

In this organization, Kamal's position has lesser importance than anybody else's.

- Ans
- ☒ 1. Goes the extra mile
 - ☒ 2. Foul play
 - ☒ 3. Child's play
 - ☒ 4. Plays a second fiddle

Question ID : 26433071824
Status : Answered
Chosen Option : 4

Q.4 Select the most appropriate option to fill in the blank.

Numerous people live a comfortable life in cities as a result of social, financial and commercial _____.

- Ans
- ☒ 1. amenities
 - ☐ 2. equipment
 - ☐ 3. concerns
 - ☐ 4. accessories

Question ID : 26433072408
Status : Answered
Chosen Option : 3

Q.5 Select the most appropriate meaning of the given idiom.

God's ape

- Ans
- ☐ 1. God's messenger
 - ☐ 2. Brave man
 - ☒ 3. Born fool
 - ☐ 4. Timid person

Question ID : 26433058330
Status : Answered
Chosen Option : 3

Q.6 The following sentence has been split into four segments. Identify the segment that contains a grammatical error.

My professor / is great lady / and motivates / all her students

- Ans
- ☐ 1. My professor
 - ☐ 2. all her students
 - ☒ 3. is great lady
 - ☐ 4. and motivates

Question ID : 26433070486
Status : Answered
Chosen Option : 3

Q.7 Sentences of a paragraph are given below in jumbled order. Arrange the sentences in the correct order to form a meaningful and coherent paragraph.

- A. There are numerous forms of violence in societal structure, but the most visible are domestic, sexual, and race and class based violence.
B. The term 'violence' ranges from mental to physical conflict and wounds, which may result in war and armed conflicts.
C. Sexual violence encompasses both, forced sexual interaction and unwanted sexual conduct, such as paraphilia and bullying.
D. Violence is the use of verbal or physical force against oneself or another person, or other coercive activity against another person on the fear of being attacked.

Ans ☒ 1. DCAB
☒ 2. BCAD
☒ 3. ABDC
☒ 4. DBAC

Question ID : 26433070574

Status : Answered

Chosen Option : 4

Q.8 Select the most appropriate homophone of the italicised word.
The thief tried to *steal* the bike.

Ans ☒ 1. Steel
☒ 2. Steele
☒ 3. Stell
☒ 4. Stale

Question ID : 26433055499

Status : Answered

Chosen Option : 1

Q.9 Select the most appropriate homonym to fill in the blank.
The _____ of musicians are amazing.

Ans ☒ 1. group
☒ 2. band
☒ 3. bunch
☒ 4. choir

Question ID : 26433055491

Status : Answered

Chosen Option : 2

Q.10 Select the most appropriate synonym of the given word.
Impertinent

Ans ☒ 1. Arrogant
☒ 2. Impolite
☒ 3. Important
☒ 4. Utilitarian

Question ID : 26433059129

Status : Not Answered

Chosen Option : --

Q.11 Select the most appropriate synonym of the highlighted word.
His guilt was manifest to all in the courtroom, because of his mannerism.

- Ans ☒ 1. inauspicious
☒ 2. zeal
☒ 3. conceal
☒ 4. obvious

Question ID : 26433058291
Status : Answered
Chosen Option : 4

Q.12 Select the most appropriate option to fill in the blanks.

You must have read Darwin's 'Origin of species', _____?

- Ans ☒ 1. haven't you
☒ 2. must you
☒ 3. had you
☒ 4. hasn't you

Question ID : 26433073263
Status : Answered
Chosen Option : 1

Q.13 Sentences of a paragraph are given below in jumbled order. Arrange the sentences in the correct order to form a meaningful and coherent paragraph.

- A. The meals are frequently served in tiny Tupperware containers and are labelled with nutritional information.
B. These services provide individually packaged pre-portioned meals to help people eat a balanced diet.
C. Customers can use these services to cook and prepare meals or get ready-to-eat meals.
D. A meal delivery service delivers fresh or frozen cooked meals to customers' homes or businesses through packaging.

- Ans ☒ 1. ACBD
☒ 2. DCBA
☒ 3. DABC
☒ 4. ABDC

Question ID : 26433058349
Status : Answered
Chosen Option : 3

Q.14 Select the option that can be used as a one-word substitute for the given group of words.

Denoting the second or second mentioned of two people or things

- Ans ☒ 1. Outmost
☒ 2. Latter
☒ 3. Following
☒ 4. Farthest

Question ID : 26433070673
Status : Answered
Chosen Option : 3

Q.15 Substitute one word for the italicised expression.
He was *proved to be right* in court and damages were awarded.

- Ans
- ☐ 1. incriminate
 - ☐ 2. criminate
 - ☐ 3. indicted
 - ☒ 4. vindicated

Question ID : 26433059754
Status : Answered
Chosen Option : 1

Q.16 The following sentence has been split into four segments. Identify the segment that contains a grammatical error.

Jason's office / is near to / the university building / in town.

- Ans
- ☒ 1. is near to
 - ☐ 2. Jason's office
 - ☐ 3. in town
 - ☐ 4. the university building

Question ID : 26433061472
Status : Not Answered
Chosen Option : --

Q.17 Select the most appropriate ANTONYM of the underlined word.

The most trenchant anti-vaccine attitudes came from those who were severely infected.

- Ans
- ☐ 1. Suitable
 - ☒ 2. Feeble
 - ☐ 3. Nonchalant
 - ☐ 4. Acerbic

Question ID : 26433058337
Status : Not Answered
Chosen Option : --

Q.18 The following sentence has been split into four segments. Identify the segment that contains an INCORRECTLY spelt word.
Looking at the tensed environment, / it was rightly predicted that the tumultous crowd / will cause havoc and disrupt the meeting / so that their voices are heard.

- Ans
- ☐ 1. Looking at the tensed environment
 - ☐ 2. so that their voices are heard
 - ☒ 3. it was rightly predicted that the tumultous crowd
 - ☐ 4. will cause havoc and disrupt the meeting

Question ID : 26433058263
Status : Answered
Chosen Option : 2

Q.19 Select the most appropriate option that can substitute the underlined part in the given sentence.

I am experiencing repetition of a sound caused by reflection of sound waves. Can you reconnect?

- Ans
- ☐ 1. echolocation
 - ☐ 2. wave reflection
 - ☒ 3. an echo
 - ☐ 4. an echo sounder

Question ID : 26433072484
Status : Answered
Chosen Option : 3

Q.20 Select the INCORRECTLY spelt word.

- Ans
- ☐ 1. Camaraderie
 - ☐ 2. Untie
 - ☐ 3. Sanguine
 - ☒ 4. Presance

Question ID : 26433066150
Status : Answered
Chosen Option : 4

Comprehension:

In the following passage, some words have been deleted. Read the passage carefully and select the most appropriate option to fill in each blank.

Syam and John were (1) _____ friends. They were born in the same village and completed their schooling in the same institute. They were very good (2) _____ studies. They received their graduation and post-graduation from the same university. They were fortunate enough to continue their friendship as they had an opportunity in the form of getting jobs in the same company. They were supporting each other sharing each other's knowledge. Soon, they (3) _____ to the top administration positions. Though busy in both personal and professional life, they managed to continue their friendship. Syam got a very rare opportunity from an opponent organisation and made a decision to leave the present organisation. John (4) _____ to the top position here. Now, professionally, they were opponents. Still, they continued their friendship and continued being loyal to the organisation where they were working. Though the friendship between these two persons was not good from the point of view of the management of the companies, as the management was not ready to lose such highly skillful and (5) _____ persons, and they were loyal, they let the friendship continue. Their friendship continued without any obstacles.

SubQuestion No : 21

Q.21 Select the most appropriate option to fill in blank number 1.

- Ans
- ☐ 1. noble
 - ☐ 2. deep
 - ☐ 3. kind
 - ☒ 4. bosom

Question ID : 26433073807
Status : Answered
Chosen Option : 2

Comprehension:

In the following passage, some words have been deleted. Read the passage carefully and select the most appropriate option to fill in each blank.

Syam and John were (1) _____ friends. They were born in the same village and completed their schooling in the same institute. They were very good (2) _____ studies. They received their graduation and post-graduation from the same university. They were fortunate enough to continue their friendship as they had an opportunity in the form of getting jobs in the same company. They were supporting each other sharing each other's knowledge. Soon, they (3) _____ to the top administration positions. Though busy in both personal and professional life, they managed to continue their friendship. Syam got a very rare opportunity from an opponent organisation and made a decision to leave the present organisation. John (4) _____ to the top position here. Now, professionally, they were opponents. Still, they continued their friendship and continued being loyal to the organisation where they were working. Though the friendship between these two persons was not good from the point of view of the management of the companies, as the management was not ready to lose such highly skillful and (5) _____ persons, and they were loyal, they let the friendship continue. Their friendship continued without any obstacles.

SubQuestion No : 22

Q.22 Select the most appropriate option to fill in blank number 2.

- Ans ☒ 1. with
 ☒ 2. on
 ☒ 3. at
 ☒ 4. in

Question ID : 26433073808
Status : Answered
Chosen Option : 3

Comprehension:

In the following passage, some words have been deleted. Read the passage carefully and select the most appropriate option to fill in each blank.

Syam and John were (1) _____ friends. They were born in the same village and completed their schooling in the same institute. They were very good (2) _____ studies. They received their graduation and post-graduation from the same university. They were fortunate enough to continue their friendship as they had an opportunity in the form of getting jobs in the same company. They were supporting each other sharing each other's knowledge. Soon, they (3) _____ to the top administration positions. Though busy in both personal and professional life, they managed to continue their friendship. Syam got a very rare opportunity from an opponent organisation and made a decision to leave the present organisation. John (4) _____ to the top position here. Now, professionally, they were opponents. Still, they continued their friendship and continued being loyal to the organisation where they were working. Though the friendship between these two persons was not good from the point of view of the management of the companies, as the management was not ready to lose such highly skillful and (5) _____ persons, and they were loyal, they let the friendship continue. Their friendship continued without any obstacles.

SubQuestion No : 23

Q.23 Select the most appropriate option to fill in blank number 3.

- Ans ☒ 1. has raised
 ☒ 2. rose
 ☒ 3. growth
 ☒ 4. rise

Question ID : 26433073809
Status : Answered
Chosen Option : 2

Comprehension:

In the following passage, some words have been deleted. Read the passage carefully and select the most appropriate option to fill in each blank.

Syam and John were (1) _____ friends. They were born in the same village and completed their schooling in the same institute. They were very good (2) _____ studies. They received their graduation and post-graduation from the same university. They were fortunate enough to continue their friendship as they had an opportunity in the form of getting jobs in the same company. They were supporting each other sharing each other's knowledge. Soon, they (3) _____ to the top administration positions. Though busy in both personal and professional life, they managed to continue their friendship. Syam got a very rare opportunity from an opponent organisation and made a decision to leave the present organisation. John (4) _____ to the top position here. Now, professionally, they were opponents. Still, they continued their friendship and continued being loyal to the organisation where they were working. Though the friendship between these two persons was not good from the point of view of the management of the companies, as the management was not ready to lose such highly skillful and (5) _____ persons, and they were loyal, they let the friendship continue. Their friendship continued without any obstacles.

SubQuestion No : 24

Q.24 Select the most appropriate option to fill in blank number 4.

- Ans
- ☒ 1. promoted
 - ☒ 2. has promoted
 - ☒ 3. had promoted
 - ☒ 4. was promoted

Question ID : 26433073810

Status : Answered

Chosen Option : 3

Comprehension:

In the following passage, some words have been deleted. Read the passage carefully and select the most appropriate option to fill in each blank.

Syam and John were (1) _____ friends. They were born in the same village and completed their schooling in the same institute. They were very good (2) _____ studies. They received their graduation and post-graduation from the same university. They were fortunate enough to continue their friendship as they had an opportunity in the form of getting jobs in the same company. They were supporting each other sharing each other's knowledge. Soon, they (3) _____ to the top administration positions. Though busy in both personal and professional life, they managed to continue their friendship. Syam got a very rare opportunity from an opponent organisation and made a decision to leave the present organisation. John (4) _____ to the top position here. Now, professionally, they were opponents. Still, they continued their friendship and continued being loyal to the organisation where they were working. Though the friendship between these two persons was not good from the point of view of the management of the companies, as the management was not ready to lose such highly skillful and (5) _____ persons, and they were loyal, they let the friendship continue. Their friendship continued without any obstacles.

SubQuestion No : 25

Q.25 Select the most appropriate option to fill in blank number 5.

- Ans
- ☒ 1. protrusive
 - ☒ 2. knowledge
 - ☒ 3. sagacious
 - ☒ 4. benighted

Question ID : 26433073811

Status : Not Attempted and Marked For Review

Chosen Option : --

Q.1 Which of the following is NOT a valid MS-Excel 2010 Math function?

- Ans
- ☒ 1. ODD()
 - ☒ 2. MOD()
 - ☒ 3. OFF()
 - ☒ 4. BASE()

Question ID : 26433095370
Status : Not Answered
Chosen Option : --

Q.2 Choose the wrong option related to cell of MS-Excel 2010:

- Ans
- ☒ 1. Cell address is denoted as A1, A2, A3
 - ☒ 2. Intersection of Row and column is known as cell
 - ☒ 3. Cells can contain text, such as letters, numbers, and dates.
 - ☒ 4. Cell address is denoted as 1, 2, 3

Question ID : 26433095414
Status : Answered
Chosen Option : 4

Q.3 Which of the following shortcut key is used to add outline to selected cells in a worksheet of MS-Excel 2010?

- Ans
- ☒ 1. Ctrl+Shift+Underscore (_)
 - ☒ 2. Ctrl+Shift+Right arrow
 - ☒ 3. Ctrl+Shift+Left Arrow
 - ☒ 4. Ctrl+Shift+Ampersand sign (&)

Question ID : 26433095528
Status : Not Answered
Chosen Option : --

Q.4 _____ is one of the most popular functions in MS-Excel 2010, and it allows you to make logical comparisons between a value and what you expect.

- Ans
- ☒ 1. IF
 - ☒ 2. COUNTIF
 - ☒ 3. FLOOR
 - ☒ 4. CEILING

Question ID : 26433095440
Status : Not Answered
Chosen Option : --

Q.5 Columns in MS-Excel 2010 are identified by:

Ans ☒ 1. A, B, C

☒ 2. @, \$, %

☒ 3. 1, 2, 3

☒ 4. *, &, ^

Question ID : 26433095403

Status : Answered

Chosen Option : 1

Q.6 In MS-Word 2010, you can cut text from one area of a document and paste that text anywhere in that document. When you cut the text, it is stored on ____.

Ans ☒ 1. TABLE

☒ 2. CLIPBOARD

☒ 3. CELL

☒ 4. ROW

Question ID : 26433095392

Status : Answered

Chosen Option : 2

Q.7 Google Chrome is a/an ____.

Ans ☒ 1. Internet service provider

☒ 2. Browser

☒ 3. Social network site

☒ 4. Mobile phone

Question ID : 26433095486

Status : Answered

Chosen Option : 2

Q.8 To quickly zoom the document in MS-Excel 2010, use the minus and plus symbols in the ____

Ans ☒ 1. Title bar

☒ 2. Formula bar

☒ 3. Horizontal scroll bar

☒ 4. Status bar

Question ID : 26433095348

Status : Answered

Chosen Option : 3

Q.9 Which of the following keyboard shortcuts is used to reset Google Chrome browser zoom to default?

- Ans
- ☐ 1. CTRL + D
 - ☐ 2. CTRL + R
 - ☐ 3. CTRL + 9
 - ☒ 4. CTRL + 0

Question ID : 26433095307

Status : Not Answered

Chosen Option : --

Q.10 _____ is a global communication system that links together thousands of individual networks.

- Ans
- ☐ 1. Topology
 - ☐ 2. ATM
 - ☒ 3. Internet
 - ☐ 4. Intranet

Question ID : 26433095395

Status : Answered

Chosen Option : 3

