



# Teachingninja.in



**Latest Govt Job updates**



**Private Job updates**



**Free Mock tests available**

**Visit - [teachingninja.in](https://teachingninja.in)**



# **Delhi Police Head Constable**

**Previous Year Paper  
(Ministerial) 20 Oct 2022  
Shift 1**



## Head Constable Ministerial in Delhi Police Examination 2022

Roll Number	
Candidate Name	
Venue Name	
Exam Date	20/10/2022
Exam Time	9:00 AM - 10:30 AM
Subject	Head Constable Ministerial in Delhi Police Examination 2022

### Section : Part-A-General Awareness

Q.1 Which of the following Harappan sites is located in present-day Rajasthan?

- Ans
- ☒ 1. Alamgirpur
  - ☒ 2. Balakot
  - ☒ 3. Kalibangan
  - ☒ 4. Dholavira

Question ID : 26433064347

Status : Answered

Chosen Option : 2

Q.2 In February 2022 who among the following became India's first-ever Men's World Champion in Wushu by securing gold at the World Championships in Shanghai, China?

- Ans
- ☒ 1. Pawan Gupta
  - ☒ 2. Rajveer Singh
  - ☒ 3. Praveen Kumar
  - ☒ 4. Surya Bhanu Pratap Singh

Question ID : 26433054837

Status : Not Answered

Chosen Option : --

Q.3 India's digital currency will debut in the country in early 2023. Who will issue this digital currency in India?

- Ans
- ☒ 1. Reserve Bank of India
  - ☒ 2. State Bank of India
  - ☒ 3. Finance Minister of India
  - ☒ 4. International Monetary Fund

Question ID : 26433059099

Status : Answered

Chosen Option : 1

Q.4 Which of the following countries has the first rank as an exporter of raw jute and jute goods?

- Ans
- ☐ 1. China
  - ☐ 2. Nepal
  - ☐ 3. Bangladesh
  - ☒ 4. India

Question ID : 26433082199  
Status : Answered  
Chosen Option : 4

Q.5 There are four seasons experienced in India and each season has its significance. Which of the following is known as the rainy season?

- Ans
- ☐ 1. Retreating monsoon
  - ☐ 2. The hot weather season
  - ☐ 3. The cold weather season
  - ☒ 4. Advancing monsoon

Question ID : 26433064096  
Status : Answered  
Chosen Option : 4

Q.6 Which of the following is a scheme launched by the Central Government in December 2021 for socio-economic upliftment and overall development of the Scheduled Castes students by providing quality residential education?

- Ans
- ☐ 1. SAMBAL
  - ☐ 2. MISSION VATSALYA
  - ☐ 3. SAMARTHYA
  - ☒ 4. SRESHTA

Question ID : 26433055570  
Status : Not Answered  
Chosen Option : --

Q.7 In June 2021, former \_\_\_\_\_ Health Minister KK Shailaja was awarded the prestigious Central European University (CEU) Open Society Prize in recognition of her commitment to public health services.

- Ans
- ☐ 1. Telangana
  - ☒ 2. Kerala
  - ☐ 3. Andhra Pradesh
  - ☐ 4. Karnataka

Question ID : 26433061794  
Status : Not Answered  
Chosen Option : --

Q.8 When did the Reserve Bank of India introduce a new category of Nonbank Financial Companies (NBFCs) called Nonbank Financial Company – Microfinance Institutions (NBFC-MFIs) with specific regulations for the micro-credit sector, focusing on customer protection?

- Ans
- ☐ 1. December 2010
  - ☒ 2. December 2011
  - ☐ 3. April 2010
  - ☐ 4. April 2011

Question ID : 26433064489  
Status : Not Answered  
Chosen Option : --

Q.9 How is the condition of land productivity defined for primitive subsistence agriculture in India?

- Ans
- ☐ 1. Medium
  - ☐ 2. Very high
  - ☐ 3. High
  - ☒ 4. Low

Question ID : 26433071575  
Status : Answered  
Chosen Option : 3

Q.10 The Narcotic Drugs and Psychotropic Substances (Amendment) Bill, 2021, was passed in the Lok Sabha on \_\_\_\_\_.

- Ans
- ☐ 1. 20 December 2021
  - ☐ 2. 29 December 2021
  - ☐ 3. 26 December 2021
  - ☒ 4. 13 December 2021

Question ID : 26433061834  
Status : Not Answered  
Chosen Option : --

Q.11 Which of the following statements is NOT true?

- Ans
- ☐ 1. The Industrial Policy 1948 recommended setting up of a planning commission.
  - ☐ 2. The Planning Commission was set up on 15 March 1950.
  - ☒ 3. The first Five-Year Plan was launched for the period 1950 to 1955.
  - ☐ 4. Self-reliant economy was the long-term objective of the Indian economy.

Question ID : 26433059106  
Status : Answered  
Chosen Option : 3

Q.12 Under the Project Elephant, construction of resorts and hotels have been banned near which Tiger Reserve?

- Ans
- ☐ 1. Bandhavgarh Tiger reserve
  - ☐ 2. Satkosia Tiger Reserve
  - ☐ 3. Mudumalai Tiger Reserve
  - ☒ 4. Corbett Tiger Reserve

Question ID : 26433095239  
Status : Answered  
Chosen Option : 4

Q.13 The Servants of Indian Society was founded by \_\_\_\_\_ in 1905.

- Ans
- ☐ 1. Subhas Chandra Bose
  - ☒ 2. Gopal Krishna Gokhale
  - ☐ 3. Lala Lajpat Rai
  - ☐ 4. Mahatma Gandhi

Question ID : 26433055014  
Status : Answered  
Chosen Option : 2

Q.14 Onam is celebrated as the homecoming of which Ausura King?

- Ans
- ☐ 1. Devadutta
  - ☐ 2. Kansa
  - ☐ 3. Yama
  - ☒ 4. Mahabali

Question ID : 26433066538  
Status : Answered  
Chosen Option : 4

Q.15 As per Census 2011, what was the difference between total literacy and female literacy rates in India?

- Ans
- ☐ 1. 9.5%
  - ☐ 2. 10.5%
  - ☒ 3. 8.5%
  - ☐ 4. 11.5%

Question ID : 26433059220  
Status : Not Answered  
Chosen Option : --

Q.16 Scientists of which university have created the world's first 'molecular robot' - millionth of a millimeter in size - that can be used to build molecules and may help discover novel drugs?

- Ans
- ☒ 1. The University of Tokyo
  - ☒ 2. Massachusetts Institute of Technology
  - ☒ 3. Stanford University
  - ☒ 4. University of Manchester

Question ID : 26433095274  
Status : Not Answered  
Chosen Option : --

Q.17 The three English missionaries, Carey, Marshman and Ward, lived and worked in:

- Ans
- ☒ 1. the French enclave of Chandernagore
  - ☒ 2. the Danish enclave of Serampore
  - ☒ 3. the Dutch enclave of Chinsurah
  - ☒ 4. the Portuguese enclave of Bandel

Question ID : 26433055535  
Status : Not Answered  
Chosen Option : --

Q.18 Who is considered as the source of authority for the Constitution of India?

- Ans
- ☒ 1. Supreme Court
  - ☒ 2. Government
  - ☒ 3. People
  - ☒ 4. President

Question ID : 26433054888  
Status : Answered  
Chosen Option : 3

Q.19 Ustad Mansur was a prominent painter in the court of which of the following Mughal rulers?

- Ans
- ☒ 1. Humayun
  - ☒ 2. Jahangir
  - ☒ 3. Shah Jahan
  - ☒ 4. Aurangzeb

Question ID : 26433055618  
Status : Answered  
Chosen Option : 2

Q.20 Which of the following dance forms is most famous among the Bhil tribe?

- Ans
- ☒ 1. Bhagoriya
  - ☒ 2. Bihu
  - ☒ 3. Gauri
  - ☒ 4. Bihra

Question ID : 26433064378  
Status : Not Answered  
Chosen Option : --

Section : Part-B-Quantitative Aptitude

Q.1 The surface area of a sphere is  $616 \text{ cm}^2$ . Calculate its volume.

(Take  $\pi = \frac{22}{7}$ )

- Ans
- ☐ 1.  $1434.33 \text{ cm}^3$
  - ☐ 2.  $1435.33 \text{ cm}^3$
  - ☒ 3.  $1437.33 \text{ cm}^3$
  - ☐ 4.  $1436.33 \text{ cm}^3$

Question ID : 26433061421  
Status : Answered  
Chosen Option : 3

Q.2 If  $15 \sin \theta + 8 \cos \theta = 17$ , then what is the value of  $15 \cos \theta - 8 \sin \theta$ ?

- Ans
- ☐ 1. 1
  - ☐ 2. 2
  - ☒ 3. 0
  - ☐ 4. 4

Question ID : 26433058986  
Status : Not Answered  
Chosen Option : --

Q.3 Simplify  $(5\frac{2}{5} - \frac{7}{5}) \times (\frac{25}{4} - \frac{10}{2}) \div (3\frac{3}{4})$ .

- Ans
- ☐ 1.  $\frac{2}{3}$
  - ☒ 2.  $\frac{4}{3}$
  - ☐ 3. 4
  - ☐ 4.  $\frac{3}{4}$

Question ID : 26433065041  
Status : Answered  
Chosen Option : 2

Q.4 Brajesh had Rs.8,600 which he invested in two parts. Simple interest received on the first part at 15% p.a. in 4 years is equal to the simple interest received on the second part at 20% p.a. in 3 years. Find the difference in the two parts.

- Ans
- ☐ 1. Rs.210
  - ☒ 2. Rs.0
  - ☐ 3. Rs.190
  - ☐ 4. Rs.290

Question ID : 26433065286  
Status : Answered  
Chosen Option : 2



Q.5 Two numbers are in the ratio 2 : 3 and their LCM is 36. Find the numbers.

Ans ☒ 1. 12, 18

☒ 2. 12, 14

☒ 3. 10, 12

☒ 4. 14, 18

Question ID : 26433063358

Status : Answered

Chosen Option : 1

Q.6 A retailer purchased at a rate of 11 mangoes for Rs.100 and sold at a rate of 10 mangoes for Rs.110. The percentage of profit for per mango sold is:

Ans ☒ 1. 21%

☒ 2. 15.5%

☒ 3. 11%

☒ 4. 22%

Question ID : 26433057124

Status : Answered

Chosen Option : 1

Q.7 Find the ratio between the fourth proportional of 16, 18, 8 and the mean proportional of 12, 27.

Ans ☒ 1. 1 : 2

☒ 2. 3 : 2

☒ 3. 2 : 5

☒ 4. 2 : 3

Question ID : 26433061734

Status : Not Answered

Chosen Option : --

Q.8 The compound interest on Rs.15,000 at 20% per annum compounded half yearly for 1.5 year is:

Ans ☒ 1. Rs.5,625

☒ 2. Rs.4,965

☒ 3. Rs.5,420

☒ 4. Rs.6,420

Question ID : 26433061076

Status : Answered

Chosen Option : 2

Q.9 If  $(7\sqrt{7}x^3 + 5\sqrt{5}y^3) \div (\sqrt{7}x + \sqrt{5}y) = (Ax^2 + By^2 + Cxy)$ , what is the value of  $(4A + 6B + \sqrt{35}C)$ ?

Ans ☒ 1. 23

☐ 2. 93

☐ 3. 35

☐ 4. 70

Question ID : 26433061946

Status : Not Answered

Chosen Option : --

Q.10  $2x + 3y - 7z = 8$ ;  $3x + 2y - 8z = 7$ ;  $x + y - z = 13$ . What is the value of  $x^2 + y^2 + z^2$ ?

Ans ☐ 1. 185

☐ 2. 205

☐ 3. 175

☒ 4. 195

Question ID : 26433061347

Status : Not Answered

Chosen Option : --

Q.11 A does  $\frac{1}{2}$  of a work in 8 days. He is then assisted by B, and they together finish the remaining work in 4 days. B alone can finish the whole work in:

Ans ☒ 1. 16 days

☐ 2. 9 days

☐ 3. 12 days

☐ 4. 20 days

Question ID : 26433063898

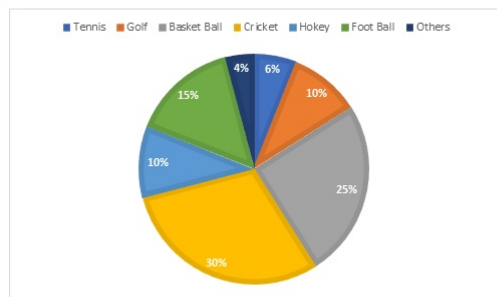
Status : Answered

Chosen Option : 1



**Q.12** The circle graph given here shows the spending of a country on various sports during a year. Study the graph carefully to answer the question.

Percentage of money spent on various sports for one year.



If the total amount spent on sports during the year was ₹2,00,00,000, then the amount spent on Cricket and Basket ball together was:

- Ans
- ✗ 1. ₹90,00,000
  - ✗ 2. ₹75,00,000
  - ✗ 3. ₹1,00,00,000
  - ✓ 4. ₹1,10,00,000

Question ID : 26433074237

Status : Answered

Chosen Option : 4

**Q.13** Each prime number has \_\_\_\_\_ factor/factors.

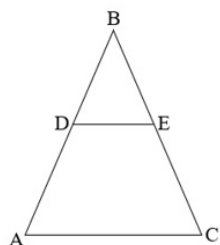
- Ans
- ✗ 1. 4
  - ✓ 2. 2
  - ✗ 3. 1
  - ✗ 4. 0

Question ID : 26433065047

Status : Answered

Chosen Option : 3

Q.14 In the figure given below, if DE is parallel to AC, BE = 2EC and DE = 12, then AC is equal to:



Ans ☒ 1. 18

☐ 2. 10

☐ 3. 14

☐ 4. 12

Question ID : 26433075826

Status : Answered

Chosen Option : 3

Q.15 The average weight of P, Q and R is 55 kg. If the average weight of P and Q is 50 kg and that of Q and R is 53 kg, then the weight of Q is:

Ans ☒ 1. 41 kg

☐ 2. 42 kg

☐ 3. 44 kg

☐ 4. 40 kg

Question ID : 26433064004

Status : Answered

Chosen Option : 1

Q.16 In what time will a 210 metre long train running at a speed of 147 km/h cross a pole?

Ans ☐ 1.  $6\frac{10}{147}$  seconds

☐ 2.  $4\frac{18}{147}$  seconds

☐ 3.  $3\frac{14}{147}$  seconds

☒ 4.  $5\frac{21}{147}$  seconds

Question ID : 26433061080

Status : Answered

Chosen Option : 4

Q.17 Find the area of an equilateral triangle having each side 12 cm long.

- Ans
- ☐ 1.  $32\sqrt{3} \text{ cm}^2$
  - ☒ 2.  $36\sqrt{3} \text{ cm}^2$
  - ☐ 3.  $28\sqrt{3} \text{ cm}^2$
  - ☐ 4.  $24\sqrt{3} \text{ cm}^2$

Question ID : 26433063967  
Status : Answered  
Chosen Option : 2

Q.18 The marked price of a book is Rs.500 but the retailer gets a discount of 30%. If the shopkeeper sells the book at the marked price, then the profit percentage is:

- Ans
- ☐ 1. 40.86%
  - ☐ 2. 42.80%
  - ☐ 3. 42.06%
  - ☒ 4. 42.86%

Question ID : 26433064017  
Status : Answered  
Chosen Option : 4

Q.19 Amit's income is 30% more than Raj's income. What percentage of Raj's income is less than Amit's income?

- Ans
- ☐ 1. 20.07%
  - ☒ 2. 23.07%
  - ☐ 3. 22.07%
  - ☐ 4. 21.07%

Question ID : 26433061397  
Status : Answered  
Chosen Option : 2

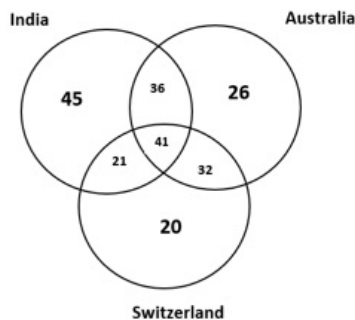
Q.20 Atul can do a piece of work in 14 days and Binu in 21 days. They worked for 7 days and the remaining work was finished by Chetan in 4 days. If they get Rs.3,000 for the whole work, what are the total wages of Binu and chetan?

- Ans
- ☐ 1. Rs.367.80
  - ☒ 2. Rs.267.86
  - ☐ 3. Rs.457.76
  - ☐ 4. Rs.287.80

Question ID : 26433061281  
Status : Not Answered  
Chosen Option : --

Section : Part-C-General Intelligence

Q.1 Study the given diagram carefully and answer the questions. The numbers in different sections indicate the number of persons who visited different countries.  
How many people visited either Australia or Switzerland but NOT India?



Ans ☒ 1. 78

☒ 2. 58

☒ 3. 52

☒ 4. 46

Question ID : 26433069361

Status : Answered

Chosen Option : 1

Q.2 Three statements are given, followed by three conclusions numbered I, II and III. Assuming the statements to be true, even if they seem to be at variance with commonly known facts, decide which of the conclusions logically follow(s) from the statements.

Statements:

All tulips are roses.

All roses are lilies.

All lilies are sunflowers.

Conclusions:

I. All roses are sunflowers.

II. Some roses are tulips.

III. Some sunflowers are roses.

Ans ☒ 1. Only conclusions I and III follow

☒ 2. All the conclusions follow

☒ 3. Only conclusions II and III follow

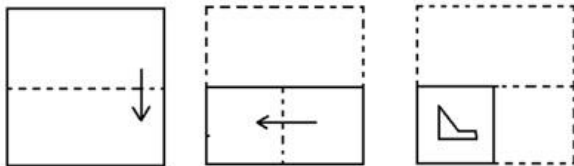
☒ 4. Only conclusions I and II follow

Question ID : 26433076532

Status : Answered

Chosen Option : 2

Q.3 The sequence of folding a piece of paper and the manner in which the folded paper has been cut is shown below. Select the figure which would most closely resemble the unfolded form of the paper.



Ans

- ✗ 1.
- ✗ 2.
- ✓ 3.
- ✗ 4.

Question ID : 26433056685

Status : Answered

Chosen Option : 3

Q.4 In a certain code language, 'BELL' is written as '52225151' and 'CALL' is written as '42625151'. How will 'BEEP' be written in that language?

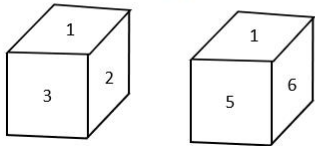
- Ans ✓ 1. 52222211
- ✗ 2. 25222211
- ✗ 3. 52221221
- ✗ 4. 52222521

Question ID : 26433057279

Status : Answered

Chosen Option : 1

**Q.5** Two different positions of the same dice are shown, the six faces of which are numbered from 1 to 6. Select the number that will be on the face opposite to the one showing 1.



- Ans**
- ☒ 1. 6
  - ☒ 2. 2
  - ☒ 3. 4
  - ☒ 4. 5

Question ID : 26433068026  
Status : Answered  
Chosen Option : 3

**Q.6** Select the numbers from among the given options that can replace the question marks (?) in the following series.  
244, 119, 207, 141, 170, 163, ?, ?

- Ans**
- ☒ 1. 130, 181
  - ☒ 2. 133, 185
  - ☒ 3. 123, 189
  - ☒ 4. 135, 185

Question ID : 26433057051  
Status : Answered  
Chosen Option : 2

**Q.7** Select the option that is related to the fifth letter cluster in the same way as the second letter cluster is related to the first letter cluster and the fourth letter cluster is related to the third letter cluster.  
JRW : AIN :: FAQ : WRH :: LXP : ?

- Ans**
- ☒ 1. JES
  - ☒ 2. COG
  - ☒ 3. HJS
  - ☒ 4. SDG

Question ID : 26433074683  
Status : Answered  
Chosen Option : 2



Q.8 Eight friends - P,Q,R,S,T,U,V and W - are sitting around a circular table, facing towards the centre of the table.  
P is an immediate neighbour of U and S. R is second to the left of S and V is fourth to the right of P. Two people are sitting between U and V. T is not an immediate neighbour of either U or V. If T is third to the left of U, and W is an immediate neighbour of V, where is Q sitting?

- Ans ☒ 1. Third to the right of T  
☒ 2. Immediate left of U  
☒ 3. Immediate left of S  
☒ 4. Third to the left of R

Question ID : 26433068811  
Status : Answered  
Chosen Option : 2

Q.9 Three of the following four letter-clusters are alike in a certain way and one is different.  
Pick the odd one out.

- Ans ☒ 1. EFGH  
☒ 2. MNOP  
☒ 3. PQRS  
☒ 4. XWYZ

Question ID : 26433056022  
Status : Answered  
Chosen Option : 4

Q.10 Which of the following numbers will replace the question mark (?) in the given series?  
2, 2, 4, 8, ?, 30, 32, 128

- Ans ☒ 1. 12  
☒ 2. 14  
☒ 3. 16  
☒ 4. 10

Question ID : 26433057553  
Status : Not Answered  
Chosen Option : --

Q.11 Eight people are sitting in two parallel rows containing four people each in such a way that there is equal distance between adjacent persons.  
In the first row, J, K, L and M are seated and all of them are facing the south.  
In the second row, S, T, U and V are seated and all of them are facing the north.  
Thus, each person faces another person from the other row.  
The person facing L is sitting second to the left of V. J is sitting third to the right of M. S is sitting second to the left of U. The person facing M is an immediate neighbour of U. T is the immediate neighbour of S and U.  
Who amongst the following faces S?

- Ans ☒ 1. K  
☒ 2. L  
☒ 3. J  
☒ 4. M

Question ID : 26433080714  
Status : Answered  
Chosen Option : 3

Q.12 Which two signs and numbers need to be interchanged to make the following equation correct?

$25 - (18 \div 2) + (62 \times 31) + 14 = 17$

- Ans
- ☒ 1. 2 and 31, ÷ and ×
  - ☒ 2. 18 and 14, ÷ and -
  - ☒ 3. 18 and 14, ÷ and ×
  - ☒ 4. 14 and 25, ÷ and ×

Question ID : 26433057103  
Status : Answered  
Chosen Option : 3

Q.13 तस्वीर में एक व्यक्ति की ओर इशारा करते हुए, एक पुरुष, अमित ने कहा, "मेरा इकलौता भाई उसकी माँ के ससुर का बेटा है, लेकिन उसका पिता नहीं है।" वह व्यक्ति अमित से किस प्रकार संबंधित है?

- Ans
- ☒ 1. पिता
  - ☒ 2. भाई
  - ☒ 3. दादा
  - ☒ 4. पुत्र

Question ID : 26433055670  
Status : Answered  
Chosen Option : 4

Q.14 अनीता एक आदमी की ओर इशारा करते हुए कहती है कि वह उसकी माँ के भाई का बेटा है। उस आदमी का अनीता से क्या संबंध है?

- Ans
- ☒ 1. दादा
  - ☒ 2. मामा का बेटा
  - ☒ 3. पिता
  - ☒ 4. चाचा

Question ID : 26433057706  
Status : Answered  
Chosen Option : 2

Q.15 In a certain code language, 'DEMAND' is written as '410132144' and 'SUPPLY' is written as '194216161225'. How will 'PRODUCT' be written in that language?

- Ans
- ☒ 1. 323615821640
  - ☒ 2. 161830442320
  - ☒ 3. 161815421320
  - ☒ 4. 161542320

Question ID : 26433065601  
Status : Answered  
Chosen Option : 3

Q.16 Select the correct mirror image of the given figure when the mirror is placed at MN as shown below.



- Ans
- ☒ 1.
  - ☒ 2.
  - ☒ 3.
  - ☒ 4.

Question ID : 26433056978  
Status : Answered  
Chosen Option : 4

Q.17 Which option represents the correct order of the given words as they would appear in an English dictionary?

- 1 Visibility
- 2 Victorious
- 3 Viewership
- 4 Visitation
- 5 Vindictive

- Ans
- ☒ 1. 5, 2, 1, 3, 4
  - ☒ 2. 4, 1, 5, 3, 2
  - ☒ 3. 5, 2, 4, 1, 3
  - ☒ 4. 2, 3, 5, 1, 4

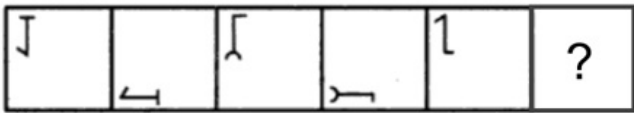
Question ID : 26433085330  
Status : Answered  
Chosen Option : 4

Q.18 Select the option that is related to the fifth letter-cluster in the same way as the second letter-cluster is related to the first letter-cluster and the fourth letter-cluster is related to the third letter-cluster.  
GIANT : IKZPV :: LARGE : NCQIG :: TIGER : ?

- Ans
- ☒ 1. VKFGT
  - ☒ 2. VKIGT
  - ☒ 3. VKGGT
  - ☒ 4. VKIGS

Question ID : 26433057256  
Status : Answered  
Chosen Option : 2

Q.19 Select the figure from among the given options that can replace the question mark (?) in the following series.

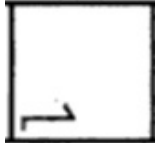


Ans

✗ 1.



✓ 2.



✗ 3.



✗ 4.

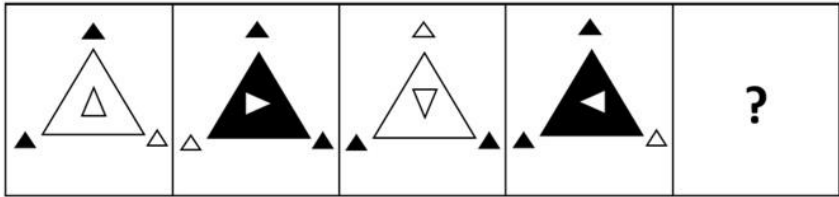


Question ID : 26433080522

Status : Answered


Chosen Option : 2

Q.20 Select the figure that will replace the question mark (?) in the following figure series.

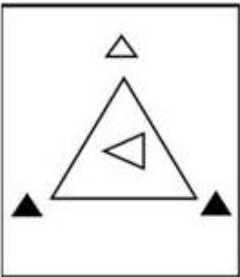


Ans

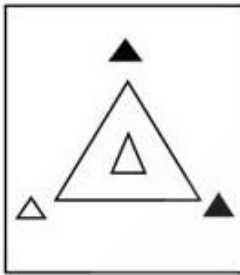
✗ 1.



✗ 2.



✓ 3.



✗ 4.



Question ID : 26433056096  
Status : Answered  
Chosen Option : 3

Q.21 Select the combination of letters that when sequentially placed in the blanks of the given series, will complete the series.  
FP\_PTGP RP\_HPRPT\_PR\_T

- Ans
- ☒ 1. FTRI
  - ☒ 2. GTPI
  - ☒ 3. RTIP
  - ☒ 4. PTTR

Question ID : 26433057810  
Status : Answered  
Chosen Option : 3

Q.22 Select the option that is related to the third term in the same way as the second term is related to the first term and the sixth term is related to the fifth term.  
14 : 44.8 :: 9 : ? :: 8 : 25.6

- Ans
- ☒ 1. 28.2
  - ☒ 2. 28.8
  - ☒ 3. 29.4
  - ☒ 4. 31.2

Question ID : 26433057067  
Status : Answered  
Chosen Option : 2

Q.23 Which letter cluster will replace the question mark (?) to complete the given series?  
UOFT, ?, KEVJ, FZQE, AULZ

- Ans
- ☒ 1. QKBO
  - ☒ 2. PJAO
  - ☒ 3. OKBP
  - ☒ 4. OJAP

Question ID : 26433057429  
Status : Not Answered  
Chosen Option : --

Q.24 Which two signs should be interchanged to make the given equation correct?  
 $19 \div 3 + 36 \times 2 - 43 = 32$

- Ans
- ☒ 1.  $\times$  and  $\div$
  - ☒ 2.  $+$  and  $\times$
  - ☒ 3.  $+$  and  $-$
  - ☒ 4.  $\div$  and  $-$

Question ID : 26433056861  
Status : Answered  
Chosen Option : 1

Q.25 Select the set in which the numbers are related in the same way as are the numbers of the following sets.  
(NOTE: Operations should be performed on the whole numbers, without breaking down the numbers into their constituent digits. E.g. 13 – Operations on 13 such as adding/deleting/multiplying etc. to 13 can be performed. Breaking down 13 into 1 and 3 and then performing mathematical operations on 1 and 3 is not allowed.)  
(71 , 86 , 101)  
(94 , 109 , 124)

- Ans
- ☒ 1. (107 , 122 , 142)
  - ☒ 2. (112 , 138 , 150)
  - ☒ 3. (126 , 141 , 156)
  - ☒ 4. (89 , 103 , 120)

Question ID : 26433057593  
Status : Not Answered  
Chosen Option : --

Section : Part-D- English Language

Q.1 Parts of a sentence are given below in jumbled order. Arrange the parts in the correct order to form a meaningful sentence.

Shakespeare / employed / during the years 1600 to 1608 / was / mainly / of his great tragic masterpieces / in the writing

- Ans
- ☒ 1. During the years 1600 to 1608 Shakespeare was mainly employed in the writing of his great tragic masterpieces.
  - ☒ 2. Shakespeare was mainly employed in the writing during the years 1600 to 1608 of his great tragic masterpieces.
  - ☒ 3. In the writing of his great tragic masterpieces mainly Shakespeare was employed during the years 1600 to 1608.
  - ☒ 4. Shakespeare during the years 1600 to 1608 in the writing of his great tragic masterpieces was mainly employed.

Question ID : 26433059612  
Status : Answered  
Chosen Option : 1

Q.2 Select the most appropriate synonym of the underlined word in the given sentence  
The library occupies an important position in a student's life.

- Ans
- ☒ 1. immerses
  - ☒ 2. engages
  - ☒ 3. soaks
  - ☒ 4. fills

Question ID : 26433058542  
Status : Answered  
Chosen Option : 4

Q.3 The following sentence has been divided into parts. One of them may contain an error. Select the part that contains the error from the given options. If you don't find any error, mark 'No error' as your answer.  
Tonight everyone are / going to be / dressed in black and white.

- Ans
- ☒ 1. going to be
  - ☒ 2. Tonight everyone are
  - ☒ 3. dressed in black and white
  - ☒ 4. No error

Question ID : 26433059059  
Status : Answered  
Chosen Option : 2

Q.4 Select the most appropriate option that can substitute the underlined segment in the given sentence.

I have created a nice small shelter for my dog.

- Ans
- ☒ 1. lair
  - ☒ 2. mint
  - ☒ 3. camp
  - ☒ 4. kennel

Question ID : 26433072402  
Status : Answered  
Chosen Option : 3

Q.5 Select the most appropriate meaning of the underlined word in a sentence.

A text message cannot supplant an actual phone call because it is incapable of expressing emotion.

- Ans
- ☒ 1. play
  - ☒ 2. create
  - ☒ 3. replace
  - ☒ 4. modify

Question ID : 26433055989  
Status : Answered  
Chosen Option : 3

Q.6 Select the INCORRECTLY spelt word.

- Ans
- ☒ 1. Managable
  - ☒ 2. Soluble
  - ☒ 3. Countless
  - ☒ 4. Limitless

Question ID : 26433055465  
Status : Answered  
Chosen Option : 1



Q.7 Select the most appropriate option to fill in the blank.

Governments, international donors, and NGOs are beginning to find innovative ways to deal with a wider range of \_\_\_\_\_.

- Ans
- ☐ 1. oppositions
  - ☐ 2. achievements
  - ☐ 3. solutions
  - ☒ 4. constraints

Question ID : 26433059619  
Status : Answered  
Chosen Option : 4

Q.8 Select the most appropriate ANTONYM of the word desire from the given sentence:  
I have an earnest desire and passion for visiting historical places that hold to apathy to me even when I don't have time to travel.

- Ans
- ☐ 1. earnest
  - ☐ 2. hold
  - ☐ 3. passion
  - ☒ 4. apathy

Question ID : 26433058548  
Status : Not Answered  
Chosen Option : --

Q.9 Select the most appropriate idiom or phrase to complete the given sentence.

When my father lost his job, we had to live on my mother's earnings. Then we really started to \_\_\_\_\_.

- Ans
- ☐ 1. put two and two together
  - ☐ 2. measure half
  - ☐ 3. keep the ball rolling
  - ☒ 4. feel the pinch

Question ID : 26433070662  
Status : Answered  
Chosen Option : 4

Q.10 Select the most appropriate option that can substitute the underlined segment in the given sentence.

They carefully tended a large group of sheep for their personal use.

- Ans
- ☐ 1. a band of sheep
  - ☐ 2. a pack of sheep
  - ☐ 3. many sheep
  - ☒ 4. a flock of sheep

Question ID : 26433058580  
Status : Answered  
Chosen Option : 4

Q.11 Select the most appropriate option to fill in the blank.

Perhaps the most \_\_\_\_\_ rule of credible and popular administration, is a government whose primary objective is for the collective good.

- Ans
- ☒ 1. fundamental
  - ☐ 2. common
  - ☐ 3. secondary
  - ☐ 4. elementary

Question ID : 26433070638  
Status : Answered  
Chosen Option : 1

Q.12 The following sentence has been split into four segments. Identify the segment that contains a grammatical error.

Place the book / on a dining table / that you can / see in that room.

- Ans
- ☐ 1. see in that room
  - ☐ 2. Place the book
  - ☐ 3. that you can
  - ☒ 4. on a dining table

Question ID : 26433070483  
Status : Not Answered  
Chosen Option : --

Q.13 Select the most appropriate ANTONYM of the highlighted word in the following sentence.

The dismal atmosphere in the living room was evident as soon as I entered.

- Ans
- ☐ 1. Boring
  - ☐ 2. Gloomy
  - ☐ 3. Doleful
  - ☒ 4. Cheerful

Question ID : 26433065222  
Status : Answered  
Chosen Option : 4

Q.14 Select the INCORRECTLY spelt word.

- Ans
- ☒ 1. Withold
  - ☐ 2. Horrific
  - ☐ 3. Rumble
  - ☐ 4. Brevity

Question ID : 26433066145  
Status : Not Answered  
Chosen Option : --

Q.15 Select the most appropriate idiom or phrase to complete the given sentence.

I know you didn't mean to break my phone, so there's no use in\_\_\_\_\_.

- Ans    ☒ 1. crying over spilt milk  
         ☐ 2. crying your eyes out  
         ☐ 3. crying wolf  
         ☐ 4. crying off

Question ID : 26433056017  
Status : Answered  
Chosen Option : 1

Q.16 Select the most appropriate option to fill in the blank.

Romeo and Juliet was written when Shakespeare was reaching the \_\_\_\_\_ of his powers as a writer of comedy.

- Ans    ☐ 1. announcement  
         ☐ 2. starting  
         ☐ 3. close  
         ☒ 4. peak

Question ID : 26433059618  
Status : Answered  
Chosen Option : 4

Q.17 Select the most appropriate option to fill in the blanks.

Duke : Duchess :: Horse : \_\_\_\_\_.

- Ans    ☐ 1. Drone  
         ☐ 2. Bull  
         ☒ 3. Mare  
         ☐ 4. Gander

Question ID : 26433073261  
Status : Answered  
Chosen Option : 3

Q.18 Parts of a sentence are given below in jumbled order. Arrange the parts in the correct order to form a meaningful sentence.

In the new millennium / essential / peace education / is / for human survival

- Ans    ☐ 1. In the new millennium for human survival peace education is essential.  
         ☒ 2. Peace education is essential for human survival in the new millennium.  
         ☐ 3. Essential peace education is in the new millennium for human survival.  
         ☐ 4. Peace education for human survival is in the new millennium essential.

Question ID : 26433059610  
Status : Answered  
Chosen Option : 2

Q.19 Select the option that can be used as a one-word substitute for the given group of words.  
One who is capable of using both hands

- Ans ☒ 1. Periodontist  
☒ 2. Intrepid  
☒ 3. Teetotaller  
☒ 4. Ambidextrous

Question ID : 26433060832  
Status : Not Answered  
Chosen Option : --

Q.20 Select the option that can be used as a one-word substitute for the given group of words.  
Walk or move in a leisurely or aimless way

- Ans ☒ 1. Perch  
☒ 2. Wonder  
☒ 3. Yonder  
☒ 4. Wander

Question ID : 26433060744  
Status : Answered  
Chosen Option : 4

Comprehension:

In the following passage, some words have been deleted. Read the passage carefully and select the most appropriate option to fill in each blank.

The question of communal (1)\_\_\_\_\_ is at stake in our country. The situation is (2)\_\_\_\_\_ day by day. Gandhi, in his (3)\_\_\_\_\_, expressed, "But my South African experiences had convinced me that it would be on the question of Hindu-Muslim unity that my ahimsa would be put to its severest test." (4)\_\_\_\_\_ his life he was the worshipper of the truth. He wrote, "Morality is the (5)\_\_\_\_\_ of things and that truth is the substance of all morality."

SubQuestion No : 21

Q.21 Select the most appropriate option to fill in blank number 1.

- Ans ☒ 1. identity  
☒ 2. harmony  
☒ 3. differences  
☒ 4. riots

Question ID : 26433072493  
Status : Answered  
Chosen Option : 2

**Comprehension:**

In the following passage, some words have been deleted. Read the passage carefully and select the most appropriate option to fill in each blank.

The question of communal (1)\_\_\_\_\_ is at stake in our country. The situation is (2)\_\_\_\_\_ day by day. Gandhi, in his (3)\_\_\_\_\_, expressed, "But my South African experiences had convinced me that it would be on the question of Hindu-Muslim unity that my ahimsa would be put to its severest test." (4)\_\_\_\_\_ his life he was the worshipper of the truth. He wrote, "Morality is the (5)\_\_\_\_\_ of things and that truth is the substance of all morality."

**SubQuestion No : 22**

**Q.22 Select the most appropriate option to fill in blank number 2.**

- Ans
- ☒ 1. shortening
  - ☒ 2. decreasing
  - ☒ 3. deteriorating
  - ☒ 4. disturbing

Question ID : 26433072494  
Status : Answered  
Chosen Option : 3

**Comprehension:**

In the following passage, some words have been deleted. Read the passage carefully and select the most appropriate option to fill in each blank.

The question of communal (1)\_\_\_\_\_ is at stake in our country. The situation is (2)\_\_\_\_\_ day by day. Gandhi, in his (3)\_\_\_\_\_, expressed, "But my South African experiences had convinced me that it would be on the question of Hindu-Muslim unity that my ahimsa would be put to its severest test." (4)\_\_\_\_\_ his life he was the worshipper of the truth. He wrote, "Morality is the (5)\_\_\_\_\_ of things and that truth is the substance of all morality."

**SubQuestion No : 23**

**Q.23 Select the most appropriate option to fill in blank number 3.**

- Ans
- ☒ 1. autobiography
  - ☒ 2. tale
  - ☒ 3. narrative
  - ☒ 4. biography

Question ID : 26433072495  
Status : Answered  
Chosen Option : 1

**Comprehension:**

In the following passage, some words have been deleted. Read the passage carefully and select the most appropriate option to fill in each blank.

The question of communal (1)\_\_\_\_\_ is at stake in our country. The situation is (2)\_\_\_\_\_ day by day. Gandhi, in his (3)\_\_\_\_\_, expressed, "But my South African experiences had convinced me that it would be on the question of Hindu-Muslim unity that my ahimsa would be put to its severest test." (4)\_\_\_\_\_ his life he was the worshipper of the truth. He wrote, "Morality is the (5)\_\_\_\_\_ of things and that truth is the substance of all morality."

**SubQuestion No : 24**

**Q.24** Select the most appropriate option to fill in blank number 4.

- Ans    ☒ 1. With  
         ☒ 2. While  
         ☒ 3. Within  
         ☒ 4. Throughout

Question ID : 26433072496  
Status : Answered  
Chosen Option : 4

**Comprehension:**

In the following passage, some words have been deleted. Read the passage carefully and select the most appropriate option to fill in each blank.

The question of communal (1)\_\_\_\_\_ is at stake in our country. The situation is (2)\_\_\_\_\_ day by day. Gandhi, in his (3)\_\_\_\_\_, expressed, "But my South African experiences had convinced me that it would be on the question of Hindu-Muslim unity that my ahimsa would be put to its severest test." (4)\_\_\_\_\_ his life he was the worshipper of the truth. He wrote, "Morality is the (5)\_\_\_\_\_ of things and that truth is the substance of all morality."

**SubQuestion No : 25**

**Q.25** Select the most appropriate option to fill in blank number 5.

- Ans    ☒ 1. product  
         ☒ 2. result  
         ☒ 3. basis  
         ☒ 4. support

Question ID : 26433072497  
Status : Answered  
Chosen Option : 2

**Section : Part-E- Computer Fundamentals**

**Q.1** A service that allows us to send messages in electronic mode over the internet with a unique address. It offers an efficient, inexpensive, and real-time means of distributing information among people.

- Ans    ☒ 1. EMAIL  
         ☒ 2. VLOG  
         ☒ 3. Videoconferencing  
         ☒ 4. BLOG

Question ID : 26433095437  
Status : Answered  
Chosen Option : 1

Q.2 Which of the following the component where email is received and managed?

- Ans
- ☐ 1. Drafts
  - ☒ 2. Inbox
  - ☐ 3. Sent mail
  - ☐ 4. Trash

Question ID : 26433095335  
Status : Answered  
Chosen Option : 2

Q.3 Data validation option is present in \_\_\_\_\_ tab in MS-Excel 2010 ribbon bar.

- Ans
- ☐ 1. View
  - ☒ 2. Data
  - ☐ 3. Insert
  - ☐ 4. File

Question ID : 26433095479  
Status : Answered  
Chosen Option : 1

Q.4 Which of the following formulas when executed will give an error in Microsoft Excel 2016?

- Ans
- ☐ 1. =SUM (L9 : L12) \* SUM (K9 : K12) / (10 - 9)
  - ☐ 2. = SUM (A9 : A15) \* SUM (K9 : K15)
  - ☐ 3. = SUM (A9 : A15) \* 10
  - ☒ 4. = SUM (A9 : A15) – B4 / 10

Question ID : 26433095360  
Status : Not Answered  
Chosen Option : --

Q.5 The distance between the written text and the edge of a paper in MS-Word 2010 is called

- Ans
- ☐ 1. Ruler Line
  - ☒ 2. Margin
  - ☐ 3. Alignment
  - ☐ 4. Indent Stop

Question ID : 26433095343  
Status : Answered  
Chosen Option : 2

Q.6 \_\_\_\_\_ function in MS-Excel 2010 rounds a number to the nearest integer or to the nearest multiple of significance.

- Ans
- ☒ 1. CEILING
  - ☐ 2. IF
  - ☐ 3. FLOOR
  - ☐ 4. COUNTIF

Question ID : 26433095430  
Status : Not Answered  
Chosen Option : --

Q.7 The keyboard shortcut key to close the MS-Word 2010 document is \_\_\_\_\_.

- Ans
- ☐ 1. Ctrl + Y
  - ☐ 2. Ctrl + X
  - ☐ 3. Ctrl + Z
  - ☒ 4. Ctrl + W

Question ID : 26433095351  
Status : Not Answered  
Chosen Option : --

Q.8 What is the minimum zoom Percentage in MS-Excel 2010 application?

- Ans
- ☐ 1. 0%
  - ☐ 2. 20%
  - ☐ 3. 50%
  - ☒ 4. 10%

Question ID : 26433095498  
Status : Not Answered  
Chosen Option : --

Q.9 What will be the result if tOGGLE cASE is applied to the word 'Examination' in MS Word 2007?

- Ans
- ☐ 1. EXAMINATION
  - ☐ 2. Examination
  - ☐ 3. examination
  - ☒ 4. eXAMINATION

Question ID : 26433095374  
Status : Answered  
Chosen Option : 4



Q.10 The rules governing the sending, traveling and receiving of information within the Internet are called

- Ans
- ☒ 1. Procedure
  - ☒ 2. Protocols
  - ☒ 3. Programs
  - ☒ 4. Algorithms

Question ID : 26433095496

Status : Answered

Chosen Option : 2



Teachingninja.in